

The background of the cover is a complex, artistic representation of molecular structures. It features several large, dark blue spheres connected by black rods, forming a network that resembles a crystal lattice or a complex organic molecule. The spheres have a glossy, reflective surface. The overall color palette is dominated by shades of blue and black, with some lighter, hazy areas in the background.

NIVALDO J. TRO

CHEMISTRY

STRUCTURE AND PROPERTIES

 Pearson

SECOND
EDITION

Main groups												Main groups						
1A ^a 1																	8A 18	
1	1 H 1.008	2A 2			Metals		Metalloids		Nonmetals				3A 13	4A 14	5A 15	6A 16	7A 17	2 He 4.003
2	3 Li 6.94	4 Be 9.012	Transition metals										5 B 10.81	6 C 12.01	7 N 14.01	8 O 16.00	9 F 19.00	10 Ne 20.18
3	11 Na 22.99	12 Mg 24.31	3B 3	4B 4	5B 5	6B 6	7B 7	8B 8 9 10		1B 11	2B 12	13 Al 26.98	14 Si 28.09	15 P 30.97	16 S 32.06	17 Cl 35.45	18 Ar 39.95	
4	19 K 39.10	20 Ca 40.08	21 Sc 44.96	22 Ti 47.87	23 V 50.94	24 Cr 52.00	25 Mn 54.94	26 Fe 55.85	27 Co 58.93	28 Ni 58.69	29 Cu 63.55	30 Zn 65.38	31 Ga 69.72	32 Ge 72.63	33 As 74.92	34 Se 78.97	35 Br 79.90	36 Kr 83.80
5	37 Rb 85.47	38 Sr 87.62	39 Y 88.91	40 Zr 91.22	41 Nb 92.91	42 Mo 95.95	43 Tc [98]	44 Ru 101.07	45 Rh 102.91	46 Pd 106.42	47 Ag 107.87	48 Cd 112.41	49 In 114.82	50 Sn 118.71	51 Sb 121.76	52 Te 127.60	53 I 126.90	54 Xe 131.29
6	55 Cs 132.91	56 Ba 137.33	57 La 138.91	72 Hf 178.49	73 Ta 180.95	74 W 183.84	75 Re 186.21	76 Os 190.23	77 Ir 192.22	78 Pt 195.08	79 Au 196.97	80 Hg 200.59	81 Tl 204.38	82 Pb 207.2	83 Bi 208.98	84 Po [208.98]	85 At [209.99]	86 Rn [222.02]
7	87 Fr [223.02]	88 Ra [226.03]	89 Ac [227.03]	104 Rf [261.11]	105 Db [262.11]	106 Sg [266.12]	107 Bh [264.12]	108 Hs [269.13]	109 Mt [268.14]	110 Ds [271]	111 Rg [272]	112 Cn [285]	113 Nh [284]	114 Fl [289]	115 Mc [289]	116 Lv [292]	117 Ts [294]	118 Og [294]

Metals

Metalloids

Nonmetals

Transition metals

Lanthanide series	58 Ce 140.12	59 Pr 140.91	60 Nd 144.24	61 Pm [145]	62 Sm 150.36	63 Eu 151.96	64 Gd 157.25	65 Tb 158.93	66 Dy 162.50	67 Ho 164.93	68 Er 167.26	69 Tm 168.93	70 Yb 173.05	71 Lu 174.97
Actinide series	90 Th 232.04	91 Pa 231.04	92 U 238.03	93 Np [237.05]	94 Pu [244.06]	95 Am [243.06]	96 Cm [247.07]	97 Bk [247.07]	98 Cf [251.08]	99 Es [252.08]	100 Fm [257.10]	101 Md [258.10]	102 No [259.10]	103 Lr [262.11]

^aThe labels on top (1A, 2A, etc.) are common American usage. The labels below these (1, 2, etc.) are those recommended by the International Union of Pure and Applied Chemistry.
Atomic masses in brackets are the masses of the longest-lived or most important isotope of radioactive elements.

List of Elements with Their Symbols and Atomic Masses

Element	Symbol	Atomic Number	Atomic Mass
Actinium	Ac	89	227.03 ^a
Aluminum	Al	13	26.98
Americium	Am	95	243.06 ^a
Antimony	Sb	51	121.76
Argon	Ar	18	39.95
Arsenic	As	33	74.92
Astatine	At	85	209.99 ^a
Barium	Ba	56	137.33
Berkelium	Bk	97	247.07 ^a
Beryllium	Be	4	9.012
Bismuth	Bi	83	208.98
Bohrium	Bh	107	264.12 ^a
Boron	B	5	10.81
Bromine	Br	35	79.90
Cadmium	Cd	48	112.41
Calcium	Ca	20	40.08
Californium	Cf	98	251.08 ^a
Carbon	C	6	12.01
Cerium	Ce	58	140.12
Cesium	Cs	55	132.91
Chlorine	Cl	17	35.45
Chromium	Cr	24	52.00
Cobalt	Co	27	58.93
Copernicium	Cn	112	285 ^a
Copper	Cu	29	63.55
Curium	Cm	96	247.07 ^a
Darmstadtium	Ds	110	271 ^a
Dubnium	Db	105	262.11 ^a
Dysprosium	Dy	66	162.50
Einsteinium	Es	99	252.08 ^a
Erbium	Er	68	167.26
Europium	Eu	63	151.96
Fermium	Fm	100	257.10 ^a
Flerovium	Fl	114	289 ^a
Fluorine	F	9	19.00
Francium	Fr	87	223.02 ^a
Gadolinium	Gd	64	157.25
Gallium	Ga	31	69.72
Germanium	Ge	32	72.63
Gold	Au	79	196.97
Hafnium	Hf	72	178.49
Hassium	Hs	108	269.13 ^a
Helium	He	2	4.003
Holmium	Ho	67	164.93
Hydrogen	H	1	1.008
Indium	In	49	114.82
Iodine	I	53	126.90
Iridium	Ir	77	192.22
Iron	Fe	26	55.85
Krypton	Kr	36	83.80
Lanthanum	La	57	138.91
Lawrencium	Lr	103	262.11 ^a
Lead	Pb	82	207.2
Lithium	Li	3	6.94
Livermorium	Lv	116	292 ^a
Lutetium	Lu	71	174.97
Magnesium	Mg	12	24.31
Manganese	Mn	25	54.94
Meitnerium	Mt	109	268.14 ^a

Element	Symbol	Atomic Number	Atomic Mass
Mendelevium	Md	101	258.10 ^a
Mercury	Hg	80	200.59
Molybdenum	Mo	42	95.95
Moscovium	Mc	115	289 ^a
Neodymium	Nd	60	144.24
Neon	Ne	10	20.18
Neptunium	Np	93	237.05 ^a
Nickel	Ni	28	58.69
Nihonium	Nh	113	284 ^a
Niobium	Nb	41	92.91
Nitrogen	N	7	14.01
Nobelium	No	102	259.10 ^a
Oganesson	Og	118	294 ^a
Osmium	Os	76	190.23
Oxygen	O	8	16.00
Palladium	Pd	46	106.42
Phosphorus	P	15	30.97
Platinum	Pt	78	195.08
Plutonium	Pu	94	244.06 ^a
Polonium	Po	84	208.98 ^a
Potassium	K	19	39.10
Praseodymium	Pr	59	140.91
Promethium	Pm	61	145 ^a
Protactinium	Pa	91	231.04
Radium	Ra	88	226.03 ^a
Radon	Rn	86	222.02 ^a
Rhenium	Re	75	186.21
Rhodium	Rh	45	102.91
Roentgenium	Rg	111	272 ^a
Rubidium	Rb	37	85.47
Ruthenium	Ru	44	101.07
Rutherfordium	Rf	104	261.11 ^a
Samarium	Sm	62	150.36
Scandium	Sc	21	44.96
Seaborgium	Sg	106	266.12 ^a
Selenium	Se	34	78.97
Silicon	Si	14	28.09
Silver	Ag	47	107.87
Sodium	Na	11	22.99
Strontium	Sr	38	87.62
Sulfur	S	16	32.06
Tantalum	Ta	73	180.95
Technetium	Tc	43	98 ^a
Tellurium	Te	52	127.60
Tennessine	Ts	117	294 ^a
Terbium	Tb	65	158.93
Thallium	Tl	81	204.38
Thorium	Th	90	232.04
Thulium	Tm	69	168.93
Tin	Sn	50	118.71
Titanium	Ti	22	47.87
Tungsten	W	74	183.84
Uranium	U	92	238.03
Vanadium	V	23	50.94
Xenon	Xe	54	131.293
Ytterbium	Yb	70	173.05
Yttrium	Y	39	88.91
Zinc	Zn	30	65.38
Zirconium	Zr	40	91.22

^aMass of longest-lived or most important isotope.

CHEMISTRY

STRUCTURE AND PROPERTIES

Second Edition

Nivaldo J. Tro

WESTMONT COLLEGE



Courseware Portfolio Management Director: Jeanne Zalesky
Executive Courseware Portfolio Manager: Terry Haugen
Courseware Director, Content Development: Jennifer Hart
Development Editor: Erin Mulligan
Courseware Analyst: Coleen Morrison
Portfolio Management Assistant: Lindsey Pruett
Portfolio Management Assistant: Shercian Kinonian
VP, Product Strategy & Development: Lauren Fogel
Content Producers: Lisa Pierce, Mae Lum
Managing Producer: Kristen Flathman
Director, Production & Digital Studio: Laura Tommasi
Editorial Content Producer: Jackie Jakob
Director, Production & Digital Studio: Katie Foley

Senior Mastering Media Producer: Jayne Sportelli
Rights and Permissions Manager: Ben Ferrini
Rights and Permissions Management: Cenveo Publisher Services
Photo Researcher: Eric Schrader
Production Management and Composition: codeMantra
Design Managers: Marilyn Perry, Maria Guglielmo Walsh
Cover and Interior Designer: Jeff Puda
Contributing Illustrators: Lachina
Manufacturing Buyer: Maura Zaldivar-Garcia
Product Marketer: Elizabeth Bell
Executive Field Marketing Manager: Chris Barker
Cover Art: Quade Paul

Credits and acknowledgments borrowed from other sources and reproduced, with permission, in this textbook appear on the appropriate page within the text or on page C-1.

Copyright © 2018, 2015 by Pearson Education, Inc., publishing as Pearson Benjamin Cummings. All rights reserved. Manufactured in the United States of America. This publication is protected by Copyright, and permission should be obtained from the publisher prior to any prohibited reproduction, storage in a retrieval system, or transmission in any form or by any means, electronic, mechanical, photocopying, recording, or likewise. To obtain permission(s) to use material from this work, please submit a written request to Pearson Education, Inc., Permissions Department, 1900 E. Lake Ave., Glenview, IL 60025. For information regarding permissions, call (847) 486-2635.

Many of the designations used by manufacturers and sellers to distinguish their products are claimed as trademarks. Where those designations appear in this book, and the publisher was aware of a trademark claim, the designations have been printed in initial caps or all caps.

MasteringChemistry™ and Learning Catalytics™ are trademarks, in the United States and/or other countries, of Pearson Education, Inc. or its affiliates.

Library of Congress Cataloging-in-Publication Data

Names: Tro, Nivaldo J.

Title: Chemistry : structure and properties / Nivaldo J. Tro.

Description: Second edition. | Hoboken, NJ : Pearson, [2018] | Includes index.

Identifiers: LCCN 2016043206 | ISBN 9780134293936

Subjects: LCSH: Chemistry—Textbooks.

Classification: LCC QD33.2.T7595 2018 | DDC 540—dc23

LC record available at <https://lcn.loc.gov/2016043206>



www.pearsonhighered.com

Student Edition: ISBN 10: 0-134-29393-2; ISBN 13: 978-0-134-29393-6
Books A La Carte Edition: ISBN 10: 0-134-52822-0; ISBN 13: 978-0-134-52822-9

1 16

About the Author



Nivaldo Tro is a professor of chemistry at Westmont College in Santa Barbara, California, where he has been a faculty member since 1990. He received his Ph.D. in chemistry from Stanford University for work on developing and using optical techniques to study the adsorption and desorption of molecules to and from surfaces in ultrahigh vacuum. He then went on to the University of California at Berkeley, where he did postdoctoral research on ultrafast reaction dynamics in solution. Since coming to Westmont, Professor Tro has been awarded grants from the American Chemical

Society Petroleum Research Fund, from the Research Corporation, and from the National Science Foundation to study the dynamics of various processes occurring in thin adlayer films adsorbed on dielectric surfaces. He has been honored as Westmont's outstanding teacher of the year three times and has also received the college's outstanding researcher of the year award. Professor Tro lives in Santa Barbara with his wife, Ann, and their four children, Michael, Ali, Kyle, and Kaden. In his leisure time, Professor Tro enjoys mountain biking, surfing, and being outdoors with his family.

To Ann, Michael, Ali, Kyle, and Kaden

Brief Contents

E Essentials: Units, Measurement, and Problem Solving 3

1 Atoms 35

2 The Quantum-Mechanical Model of the Atom 75

3 Periodic Properties of the Elements 113

4 Molecules and Compounds 159

5 Chemical Bonding I 205

6 Chemical Bonding II 251

7 Chemical Reactions and Chemical Quantities 287

8 Introduction to Solutions and Aqueous Reactions 319

9 Thermochemistry 367

10 Gases 415

11 Liquids, Solids, and Intermolecular Forces 463

12 Crystalline Solids and Modern Materials 505

13 Solutions 539

14 Chemical Kinetics 585

15 Chemical Equilibrium 639

16 Acids and Bases 685

17 Aqueous Ionic Equilibrium 739

18 Free Energy and Thermodynamics 797

19 Electrochemistry 845

20 Radioactivity and Nuclear Chemistry 893

21 Organic Chemistry 935

22 Transition Metals and Coordination Compounds 985

Appendix I Common Mathematical Operations in Chemistry A-1

Appendix II Useful Data A-7

Appendix III Answers to Selected End-of-Chapter Problems A-19

Appendix VI Answers to In-Chapter Practice Problems A-53

Glossary G-1

Credits C-1

Index I-1

Interactive Media Contents

Interactive Worked Examples (IWEs)

- E.3** Determining the Number of Significant Figures in a Number
- E.4** Significant Figures in Calculations
- E.7** Unit Conversion
- E.8** Unit Conversions Involving Units Raised to a Power
- E.9** Density as a Conversion Factor
- E.11** Problems with Equations
- 1.3** Atomic Numbers, Mass Numbers, and Isotope Symbols
- 1.4** Atomic Mass
- 1.7** The Mole Concept—Converting between Mass and Number of Atoms
- 1.8** The Mole Concept
- 2.2** Photon Energy
- 2.3** Wavelength, Energy, and Frequency
- 2.5** Quantum Numbers I
- 2.7** Wavelength of Light for a Transition in the Hydrogen Atom
- 3.4** Writing Electron Configurations from the Periodic Table
- 3.6** Atomic Size
- 3.7** Electron Configurations and Magnetic Properties for Ions
- 3.9** First Ionization Energy
- 4.3** Writing Formulas for Ionic Compounds
- 4.10** The Mole Concept—Converting between Mass and Number of Molecules
- 4.13** Chemical Formulas as Conversion Factors
- 4.15** Obtaining an Empirical Formula from Experimental Data
- 4.18** Obtaining an Empirical Formula from Combustion Analysis
- 5.2** Writing Lewis Structures
- 5.4** Writing Lewis Structures for Polyatomic Ions
- 5.5** Writing Resonance Structures
- 5.6** Assigning Formal Charges
- 5.8** Writing Lewis Structures for Compounds Having Expanded Octets
- 5.10** Predicting Molecular Geometries
- 5.12** Predicting the Shape of Larger Molecules
- 5.13** Determining If a Molecule Is Polar
- 6.3** Hybridization and Bonding Scheme
- 6.5** Molecular Orbital Theory
- 7.2** Balancing Chemical Equations
- 7.4** Stoichiometry
- 7.6** Limiting Reactant and Theoretical Yield
- 8.1** Calculating Solution Concentration
- 8.2** Using Molarity in Calculations
- 8.4** Solution Stoichiometry
- 8.6** Writing Equations for Precipitation Reactions
- 9.2** Temperature Changes and Heat Capacity
- 9.3** Thermal Energy Transfer
- 9.5** Measuring ΔE_{rxn} in a Bomb Calorimeter
- 9.7** Stoichiometry Involving ΔH
- 9.8** Measuring ΔH_{rxn} in a Coffee-Cup Calorimeter
- 9.10** Calculating ΔH_{rxn} from Bond Energies
- 9.12** $\Delta H_{\text{rxn}}^\circ$ and Standard Enthalpies of Formation
- 10.5** Ideal Gas Law I
- 10.7** Density of a Gas
- 10.8** Molar Mass of a Gas
- 10.13** Graham's Law of Effusion
- 10.14** Gases in Chemical Reactions
- 11.1** Dipole–Dipole Forces
- 11.2** Hydrogen Bonding
- 11.3** Using the Heat of Vaporization in Calculations
- 11.5** Using the Two-Point Form of the Clausius–Clapeyron Equation to Predict the Vapor Pressure at a Given Temperature
- 11.6** Navigation within a Phase Diagram
- 12.4** Relating Density to Crystal Structure
- 13.3** Using Parts by Mass in Calculations
- 13.4** Calculating Concentrations
- 13.5** Converting between Concentration Units
- 13.6** Calculating the Vapor Pressure of a Solution Containing a Nonvolatile Nonelectrolyte Solute
- 13.9** Boiling Point Elevation
- 14.2** Determining the Order and Rate Constant of a Reaction
- 14.4** The First-Order Integrated Rate Law: Determining the Concentration of a Reactant at a Given Time
- 14.8** Using the Two-Point Form of the Arrhenius Equation
- 14.9** Reaction Mechanisms
- 15.1** Expressing Equilibrium Constants for Chemical Equations
- 15.5** Finding Equilibrium Constants from Experimental Concentration Measurements
- 15.8** Finding Equilibrium Concentrations When You Know the Equilibrium Constant and All but One of the Equilibrium Concentrations of the Reactants and Products
- 15.9** Finding Equilibrium Concentrations from Initial Concentrations and the Equilibrium Constant
- 15.12** Finding Equilibrium Concentrations from Initial Concentrations in Cases with a Small Equilibrium Constant
- 15.14** The Effect of a Concentration Change on Equilibrium
- 16.1** Identifying Brønsted–Lowry Acids and Bases and Their Conjugates
- 16.3** Calculating pH from $[\text{H}_3\text{O}^+]$ or $[\text{OH}^-]$
- 16.5** Finding the $[\text{H}_3\text{O}^+]$ of a Weak Acid Solution

- 16.7** Finding the pH of a Weak Acid Solution in Cases Where the *x* is *small* Approximation Does Not Work
- 16.8** Finding the Equilibrium Constant from pH
- 16.9** Finding the Percent Ionization of a Weak Acid
- 16.12** Finding the $[\text{OH}^-]$ and pH of a Weak Base Solution
- 16.14** Finding the pH of a Solution Containing an Anion Acting as a Base
- 17.2** Calculating the pH of a Buffer Solution as an Equilibrium Problem and with the Henderson–Hasselbalch Equation
- 17.3** Calculating the pH Change in a Buffer Solution after the Addition of a Small Amount of Strong Acid or Base
- 17.4** Using the Henderson–Hasselbalch Equation to Calculate the pH of a Buffer Solution Composed of a Weak Base and Its Conjugate Acid
- 17.6** Strong Base–Strong Acid Titration pH Curve
- 17.7** Weak Acid–Strong Base Titration pH Curve
- 17.8** Calculating Molar Solubility from K_{sp}
- 18.4** Calculating Gibbs Free Energy Changes and Predicting Spontaneity from ΔH and ΔS
- 18.5** Calculating Standard Entropy Changes ($\Delta S_{\text{rxn}}^\circ$)
- 18.6** Calculating the Standard Change in Free Energy for a Reaction Using $\Delta G_{\text{rxn}}^\circ = \Delta H_{\text{rxn}}^\circ - T\Delta S_{\text{rxn}}^\circ$
- 18.10** Calculating ΔG_{rxn} under Nonstandard Conditions
- 18.11** The Equilibrium Constant and $\Delta G_{\text{rxn}}^\circ$
- 19.2** Half-Reaction Method of Balancing Aqueous Redox Equations in Acidic Solution
- 19.3** Balancing Redox Reactions Occurring in Basic Solution
- 19.4** Calculating Standard Potentials for Electrochemical Cells from Standard Electrode Potentials of the Half-Reactions
- 19.6** Relating ΔG° and E_{cell}°
- 20.4** Radioactive Decay Kinetics
- 20.5** Using Radiocarbon Dating to Estimate Age
- 21.3** Naming Alkanes

Key Concept Videos (KCVs)

- E.8** Solving Chemical Problems
- 1.1** Structure Determines Properties
- 1.2** Classifying Matter
- 1.5** Atomic Theory
- 1.8** Subatomic Particles and Isotope Symbols
- 1.10** The Mole Concept
- 2.2** The Nature of Light
- 2.4** The Wave Nature of Matter
- 2.5** Quantum Mechanics and the Atom: Orbitals and Quantum Numbers
- 3.3** Electron Configurations
- 3.4** Writing an Electron Configuration Based on an Element's Position on the Periodic Table
- 3.6** Periodic Trends in the Size of Atoms and Effective Nuclear Charge
- 4.4** The Lewis Model for Chemical Bonding
- 4.6** Naming Ionic Compounds
- 4.8** Naming Molecular Compounds
- 5.3** Writing Lewis Structures for Molecular Compounds
- 5.4** Resonance and Formal Charge
- 5.7** VSEPR Theory
- 5.8** VSEPR Theory: The Effect of Lone Pairs
- 6.2** Valence Bond Theory
- 6.3** Valence Bond Theory: Hybridization
- 7.3** Writing and Balancing Chemical Equations
- 7.4** Reaction Stoichiometry
- 7.5** Limiting Reactant, Theoretical Yield, and Percent Yield
- 8.5** Reactions in Solution
- 9.3** The First Law of Thermodynamics
- 9.4** Heat Capacity
- 9.6** The Change in Enthalpy for a Chemical Reaction
- 10.2** Kinetic Molecular Theory
- 10.4** Simple Gas Laws and Ideal Gas Law
- 10.5** Simple Gas Laws and Ideal Gas Law
- 10.7** Mixtures of Gases and Partial Pressures
- 11.3** Intermolecular Forces
- 11.5** Vaporization and Vapor Pressure
- 11.7** Heating Curve for Water
- 11.8** Phase Diagrams
- 12.3** Unit Cells: Simple Cubic, Body-Centered Cubic, and Face-Centered Cubic
- 13.4** Solution Equilibrium and the Factors Affecting Solubility
- 13.5** Solution Concentration: Molarity, Molality, Parts by Mass and Volume, Mole Fraction
- 13.6** Colligative Properties
- 14.4** The Rate Law for a Chemical Reaction
- 14.5** The Integrated Rate Law
- 14.6** The Effect of Temperature on Reaction Rate
- 15.3** The Equilibrium Constant
- 15.8** Finding Equilibrium Concentrations from Initial Concentrations
- 15.9** Le Châtelier's Principle
- 16.3** Definitions of Acids and Bases
- 16.7** Finding the $[\text{H}_3\text{O}^+]$ and pH of Strong and Weak Acid Solutions
- 16.9** The Acid–Base Properties of Ions and Salts
- 17.2** Buffers
- 17.2** Finding pH and pH Changes in Buffer Solutions
- 17.4** The Titration of a Weak Acid and a Strong Base
- 18.3** Entropy and the Second Law of Thermodynamics
- 18.4** Standard Molar Entropies
- 18.6** The Effect of ΔH , ΔS , and T on Reaction Spontaneity
- 18.3** Entropy and the Second Law of Thermodynamics
- 19.4** Standard Electrode Potentials
- 19.5** Cell Potential, Free Energy, and the Equilibrium Constant
- 20.3** Types of Radioactivity

Contents

Preface xviii

E Essentials: Units, Measurement, and Problem Solving 3



- E.1 The Metric Mix-up: A \$125 Million Unit Error 3**
- E.2 The Units of Measurement 4**
 - The Standard Units 4 The Meter: A Measure of Length 4
 - The Kilogram: A Measure of Mass 5 The Second: A Measure of Time 5
 - The Kelvin: A Measure of Temperature 5
 - Prefix Multipliers 6 Units of Volume 7
- E.3 The Reliability of a Measurement 8**
 - Reporting Measurements to Reflect Certainty 8
 - Precision and Accuracy 9
- E.4 Significant Figures in Calculations 10**
 - Counting Significant Figures 10 Exact Numbers 11
 - Significant Figures in Calculations 12
- E.5 Density 14**
- E.6 Energy and Its Units 15**
 - The Nature of Energy 15 Energy Units 16
 - Quantifying Changes in Energy 17
- E.7 Converting between Units 18**
- E.8 Problem-Solving Strategies 20**
 - Units Raised to a Power 22 Order-of-Magnitude Estimations 23
- E.9 Solving Problems Involving Equations 24**

REVIEW Self-Assessment 26 Key Learning Outcomes 27
Key Terms 27 Key Concepts 27 Key Equations and Relationships 28

EXERCISES Review Questions 28 Problems by Topic 28
Cumulative Problems 31 Challenge Problems 32 Conceptual
Problems 32 Questions for Group Work 33 Data Interpretation
and Analysis 33 Answers to Conceptual Connections 33

1 Atoms 35



- 1.1 A Particulate View of the World: Structure Determines Properties 35**
- 1.2 Classifying Matter: A Particulate View 37**
 - The States of Matter: Solid, Liquid, and Gas 37
 - Elements, Compounds, and Mixtures 38
- 1.3 The Scientific Approach to Knowledge 39**
 - Creativity and Subjectivity in Science 40
- 1.4 Early Ideas about the Building Blocks of Matter 41**
- 1.5 Modern Atomic Theory and the Laws That Led to It 41**
 - The Law of Conservation of Mass 42 The Law of Definite Proportions 43
 - The Law of Multiple Proportions 44 John Dalton and the Atomic Theory 45
- 1.6 The Discovery of the Electron 45**
 - Cathode Rays 45 Millikan's Oil Drop Experiment: The Charge of the Electron 46
- 1.7 The Structure of the Atom 48**
- 1.8 Subatomic Particles: Protons, Neutrons, and Electrons 50**
 - Elements: Defined by Their Numbers of Protons 50 Isotopes: When the Number of Neutrons Varies 52
 - Ions: Losing and Gaining Electrons 54
- 1.9 Atomic Mass: The Average Mass of an Element's Atoms 54**
 - Mass Spectrometry: Measuring the Mass of Atoms and Molecules 55

1.10 Atoms and the Mole: How Many Particles? 57

The Mole: A Chemist's "Dozen" 57 Converting between Number of Moles and Number of Atoms 58 Converting between Mass and Amount (Number of Moles) 58

1.11 The Origins of Atoms and Elements 62

REVIEW Self-Assessment 62 Key Learning Outcomes 63
Key Terms 64 Key Concepts 64 Key Equations and Relationships 65

EXERCISES Review Questions 65 Problems by Topic 66
Cumulative Problems 70 Challenge Problems 71 Conceptual Problems 71 Questions for Group Work 72 Data Interpretation and Analysis 72 Answers to Conceptual Connections 73

2 The Quantum-Mechanical Model of the Atom 75

**2.1 Schrödinger's Cat 75****2.2 The Nature of Light 76**

The Wave Nature of Light 76 The Electromagnetic Spectrum 78 Interference and Diffraction 80 The Particle Nature of Light 80

2.3 Atomic Spectroscopy and the Bohr Model 85

Atomic Spectra 85 The Bohr Model 86 Atomic Spectroscopy and the Identification of Elements 87

2.4 The Wave Nature of Matter: The de Broglie Wavelength, the Uncertainty Principle, and Indeterminacy 88

The de Broglie Wavelength 89 The Uncertainty Principle 90 Indeterminacy and Probability Distribution Maps 92

2.5 Quantum Mechanics and the Atom 93

Solutions to the Schrödinger Equation for the Hydrogen Atom 94 Atomic Spectroscopy Explained 96

2.6 The Shapes of Atomic Orbitals 99

s Orbitals ($l = 0$) 99 p Orbitals ($l = 1$) 100 d Orbitals ($l = 2$) 100 f Orbitals ($l = 3$) 102 The Phase of Orbitals 103 The Shape of Atoms 103

REVIEW Self-Assessment 104 Key Learning Outcomes 105
Key Terms 105 Key Concepts 105 Key Equations and Relationships 106

EXERCISES Review Questions 106 Problems by Topic 107
Cumulative Problems 109 Challenge Problems 110 Conceptual Problems 110 Questions for Group Work 111 Data Interpretation and Analysis 111 Answers to Conceptual Connections 111

3 Periodic Properties of the Elements 113

**3.1 Aluminum: Low-Density Atoms Result in Low-Density Metal 113****3.2 The Periodic Law and the Periodic Table 114****3.3 Electron Configurations: How Electrons Occupy Orbitals 117**

Electron Spin and the Pauli Exclusion Principle 117
Sublevel Energy Splitting in Multi-electron Atoms 118
Electron Configurations for Multi-electron Atoms 121

3.4 Electron Configurations, Valence Electrons, and the Periodic Table 124

Orbital Blocks in the Periodic Table 125 Writing an Electron Configuration for an Element from Its Position in the Periodic Table 126 The Transition and Inner Transition Elements 127

3.5 Electron Configurations and Elemental Properties 128

Metals and Nonmetals 128 Families of Elements 129
The Formation of Ions 130

3.6 Periodic Trends in Atomic Size and Effective Nuclear Charge 131

Effective Nuclear Charge 133 Atomic Radii and the Transition Elements 134

3.7 Ions: Electron Configurations, Magnetic Properties, Radii, and Ionization Energy 136

Electron Configurations and Magnetic Properties of Ions 136
Ionic Radii 138 Ionization Energy 140 Trends in First Ionization Energy 140 Exceptions to Trends in First Ionization Energy 143 Trends in Second and Successive Ionization Energies 143

3.8 Electron Affinities and Metallic Character 144


Electron Affinity 144 Metallic Character 145

3.9 Periodic Trends Summary 147

REVIEW Self-Assessment 148 Key Learning Outcomes 149
Key Terms 150 Key Concepts 150 Key Equations and Relationships 151

EXERCISES Review Questions 151 Problems by Topic 152
Cumulative Problems 154 Challenge Problems 155 Conceptual Problems 156 Questions for Group Work 156 Data Interpretation and Analysis 156 Answers to Conceptual Connections 157

4 Molecules and Compounds 159



- 4.1 Hydrogen, Oxygen, and Water 159**
- 4.2 Types of Chemical Bonds 160**
- 4.3 Representing Compounds: Chemical Formulas and Molecular Models 162**
Types of Chemical Formulas 162 Molecular Models 164
- 4.4 The Lewis Model: Representing Valence Electrons with Dots 164**
- 4.5 Ionic Bonding: The Lewis Model and Lattice Energies 166**
Ionic Bonding and Electron Transfer 166 Lattice Energy: The Rest of the Story 167 Ionic Bonding: Models and Reality 168
- 4.6 Ionic Compounds: Formulas and Names 169**
Writing Formulas for Ionic Compounds 169 Naming Ionic Compounds 170 Naming Binary Ionic Compounds Containing a Metal That Forms Only One Type of Cation 171 Naming Binary Ionic Compounds Containing a Metal That Forms More Than One Type of Cation 171 Naming Ionic Compounds Containing Polyatomic Ions 173 Hydrated Ionic Compounds 174
- 4.7 Covalent Bonding: Simple Lewis Structures 175**
Single Covalent Bonds 175 Double and Triple Covalent Bonds 176 Covalent Bonding: Models and Reality 176
- 4.8 Molecular Compounds: Formulas and Names 177**
- 4.9 Formula Mass and the Mole Concept for Compounds 179**
Molar Mass of a Compound 179 Using Molar Mass to Count Molecules by Weighing 180
- 4.10 Composition of Compounds 181**
Mass Percent Composition as a Conversion Factor 182 Conversion Factors from Chemical Formulas 184
- 4.11 Determining a Chemical Formula from Experimental Data 186**
Calculating Molecular Formulas for Compounds 188 Combustion Analysis 189
- 4.12 Organic Compounds 191**

REVIEW Self-Assessment 193 Key Learning Outcomes 193
Key Terms 194 Key Concepts 194 Key Equations and Relationships 195

EXERCISES Review Questions 196 Problems by Topic 196
Cumulative Problems 200 Challenge Problems 201 Conceptual Problems 201 Questions for Group Work 202 Data Interpretation and Analysis 202 Answers to Conceptual Connections 202

5 Chemical Bonding I 205




- 5.1 Morphine: A Molecular Impostor 205**
- 5.2 Electronegativity and Bond Polarity 206**
Electronegativity 207 Bond Polarity, Dipole Moment, and Percent Ionic Character 208
- 5.3 Writing Lewis Structures for Molecular Compounds and Polyatomic Ions 210**
Writing Lewis Structures for Molecular Compounds 210 Writing Lewis Structures for Polyatomic Ions 212
- 5.4 Resonance and Formal Charge 212**
Resonance 212 Formal Charge 215
- 5.5 Exceptions to the Octet Rule: Odd-Electron Species, Incomplete Octets, and Expanded Octets 217**
Odd-Electron Species 218 Incomplete Octets 218 Expanded Octets 219
- 5.6 Bond Energies and Bond Lengths 220**
Bond Energy 221 Bond Length 222
- 5.7 VSEPR Theory: The Five Basic Shapes 223**
Two Electron Groups: Linear Geometry 223 Three Electron Groups: Trigonal Planar Geometry 224 Four Electron Groups: Tetrahedral Geometry 224 Five Electron Groups: Trigonal Bipyramidal Geometry 225 Six Electron Groups: Octahedral Geometry 226
- 5.8 VSEPR Theory: The Effect of Lone Pairs 227**
Four Electron Groups with Lone Pairs 227 Five Electron Groups with Lone Pairs 229 Six Electron Groups with Lone Pairs 230
- 5.9 VSEPR Theory: Predicting Molecular Geometries 231**
Representing Molecular Geometries on Paper 234 Predicting the Shapes of Larger Molecules 234
- 5.10 Molecular Shape and Polarity 235**
Polarity in Diatomic Molecules 235 Polarity in Polyatomic Molecules 236 Vector Addition 237

REVIEW Self-Assessment 239 Key Learning Outcomes 241
Key Terms 241 Key Concepts 241 Key Equations and Relationships 242

EXERCISES Review Questions 242 Problems by Topic 243
Cumulative Problems 245 Challenge Problems 247 Conceptual Problems 248 Questions for Group Work 248 Data Interpretation and Analysis 249 Answers to Conceptual Connections 249

6 Chemical Bonding II 251




- 6.1 Oxygen: A Magnetic Liquid 251**
- 6.2 Valence Bond Theory: Orbital Overlap as a Chemical Bond 252**
- 6.3 Valence Bond Theory: Hybridization of Atomic Orbitals 254**
 sp^3 Hybridization 255 sp^2 Hybridization and Double Bonds 257
 sp Hybridization and Triple Bonds 261 sp^3d and sp^3d^2
 Hybridization 262 Writing Hybridization and Bonding
 Schemes 263
- 6.4 Molecular Orbital Theory: Electron Delocalization 266**
 Linear Combination of Atomic Orbitals (LCAO) 267 Second-
 Period Homonuclear Diatomic Molecules 270 Second-Period
 Heteronuclear Diatomic Molecules 276
- 6.5 Molecular Orbital Theory: Polyatomic Molecules 277**

REVIEW Self-Assessment 279 Key Learning Outcomes 279
 Key Terms 280 Key Concepts 280 Key Equations and Relationships 280

EXERCISES Review Questions 280 Problems by Topic 281
 Cumulative Problems 283 Challenge Problems 284 Conceptual
 Problems 285 Questions for Group Work 285 Data Interpretation
 and Analysis 285 Answers to Conceptual Connections 285

7 Chemical Reactions and Chemical Quantities 287



- 7.1 Climate Change and the Combustion of Fossil Fuels 287**
- 7.2 Chemical and Physical Change 289**
- 7.3 Writing and Balancing Chemical Equations 290**

7.4 Reaction Stoichiometry: How Much Carbon Dioxide? 295

Making Pizza: The Relationships among Ingredients 295 Making
 Molecules: Mole-to-Mole Conversions 295 Making Molecules:
 Mass-to-Mass Conversions 296

7.5 Stoichiometric Relationships: Limiting Reactant, Theoretical Yield, Percent Yield, and Reactant in Excess 299

Limiting Reactant and Yield 299 Reactant in Excess 305

7.6 Three Examples of Chemical Reactions: Combustion, Alkali Metals, and Halogens 306

Combustion Reactions 307 Alkali Metal Reactions 307
 Halogen Reactions 308

REVIEW Self-Assessment 309 Key Learning Outcomes 310
 Key Terms 310 Key Concepts 310 Key Equations and Relationships 311

EXERCISES Review Questions 311 Problems by Topic 312
 Cumulative Problems 315 Challenge Problems 316 Conceptual
 Problems 316 Questions for Group Work 317 Data Interpretation
 and Analysis 317 Answers to Conceptual Connections 317

8 Introduction to Solutions and Aqueous Reactions 319



8.1 Molecular Gastronomy 319

8.2 Solution Concentration 320

Quantifying Solution Concentration 320 Using Molarity in
 Calculations 321 Solution Dilution 322

8.3 Solution Stoichiometry 325

8.4 Types of Aqueous Solutions and Solubility 326

Electrolyte and Nonelectrolyte Solutions 327 The Solubility of
 Ionic Compounds 329

8.5 Precipitation Reactions 331

8.6 Representing Aqueous Reactions: Molecular, Ionic, and Complete Ionic Equations 336

8.7 Acid–Base Reactions 337

Properties of Acids and Bases 338 Naming Binary Acids 339
 Naming Oxyacids 340 Acid–Base Reactions 340 Acid–Base
 Titrations 343

8.8 Gas-Evolution Reactions 346


8.9 Oxidation–Reduction Reactions 347

Oxidation States 349 Identifying Redox Reactions 351

REVIEW Self-Assessment 356 Key Learning Outcomes 357
Key Terms 358 Key Concepts 358 Key Equations and Relationships 359

EXERCISES Review Questions 359 Problems by Topic 359
Cumulative Problems 362 Challenge Problems 362 Conceptual
Problems 363 Questions for Group Work 363 Data Interpretation
and Analysis 364 Answers to Conceptual Connections 365

9 Thermochemistry 367



- 9.1 Fire and Ice 367**
- 9.2 The Nature of Energy: Key Definitions 368**
- 9.3 The First Law of Thermodynamics: There Is No Free Lunch 370**
- 9.4 Quantifying Heat and Work 373**
Heat 373 Work: Pressure–Volume Work 377
- 9.5 Measuring ΔE for Chemical Reactions: Constant-Volume Calorimetry 379**
- 9.6 Enthalpy: The Heat Evolved in a Chemical Reaction at Constant Pressure 381**
Exothermic and Endothermic Processes: A Particulate View 383
Stoichiometry Involving ΔH : Thermochemical Equations 384
- 9.7 Measuring ΔH for Chemical Reactions: Constant-Pressure Calorimetry 385**
- 9.8 Relationships Involving ΔH_{rxn} 387**
- 9.9 Determining Enthalpies of Reaction from Bond Energies 389**
- 9.10 Determining Enthalpies of Reaction from Standard Enthalpies of Formation 392**
Standard States and Standard Enthalpy Changes 392
Calculating the Standard Enthalpy Change for a Reaction 394
- 9.11 Lattice Energies for Ionic Compounds 398**
Calculating Lattice Energy: The Born–Haber Cycle 398 Trends
in Lattice Energies: Ion Size 400 Trends in Lattice Energies:
Ion Charge 400

REVIEW Self-Assessment 401 Key Learning Outcomes 403
Key Terms 403 Key Concepts 404 Key Equations and Relationships 404

EXERCISES Review Questions 405 Problems by Topic 406
Cumulative Problems 409 Challenge Problems 410 Conceptual
Problems 411 Questions for Group Work 412 Data Interpretation
and Analysis 413 Answers to Conceptual Connections 413

10 Gases 415



- 10.1 Supersonic Skydiving and the Risk of Decompression 415**
- 10.2 A Particulate Model for Gases: Kinetic Molecular Theory 416**
- 10.3 Pressure: The Result of Particle Collisions 417**
Pressure Units 418 The Manometer: A Way to Measure
Pressure in the Laboratory 419
- 10.4 The Simple Gas Laws: Boyle's Law, Charles's Law, and Avogadro's Law 420**
Boyle's Law: Volume and Pressure 420 Charles's Law: Volume
and Temperature 422 Avogadro's Law: Volume and Amount
(in Moles) 424
- 10.5 The Ideal Gas Law 425**
The Ideal Gas Law Encompasses the Simple Gas Laws 426
Calculations Using the Ideal Gas Law 427 Kinetic Molecular
Theory and the Ideal Gas Law 428
- 10.6 Applications of the Ideal Gas Law: Molar Volume, Density, and Molar Mass of a Gas 430**
Molar Volume at Standard Temperature and Pressure 430
Density of a Gas 430 Molar Mass of a Gas 432
- 10.7 Mixtures of Gases and Partial Pressures 433**
Deep-Sea Diving and Partial Pressures 435 Collecting Gases
over Water 438
- 10.8 Temperature and Molecular Velocities 440**
- 10.9 Mean Free Path, Diffusion, and Effusion of Gases 442**
- 10.10 Gases in Chemical Reactions: Stoichiometry Revisited 444**
Molar Volume and Stoichiometry 446
- 10.11 Real Gases: The Effects of Size and Intermolecular Forces 447**
The Effect of the Finite Volume of Gas Particles 447
The Effect of Intermolecular Forces 448 Van der Waals
Equation 449 Real Gas Behavior 449

REVIEW Self-Assessment 450 Key Learning Outcomes 451
Key Terms 452 Key Concepts 452 Key Equations and Relationships 452

EXERCISES Review Questions 453 Problems by Topic 454
Cumulative Problems 457 Challenge Problems 459 Conceptual
Problems 460 Questions for Group Work 460 Data Interpretation and
Analysis 460 Answers to Conceptual Connections 461

11 Liquids, Solids, and Intermolecular Forces 463




- 11.1 Water, No Gravity 463**
- 11.2 Solids, Liquids, and Gases: A Molecular Comparison 464**
Properties of the States of Matter 465 Changes between States 466
- 11.3 Intermolecular Forces: The Forces That Hold Condensed States Together 466**
Dispersion Force 467 Dipole–Dipole Force 470 Hydrogen Bonding 472 Ion–Dipole Force 475
- 11.4 Intermolecular Forces in Action: Surface Tension, Viscosity, and Capillary Action 476**
Surface Tension 476 Viscosity 477 Capillary Action 477
- 11.5 Vaporization and Vapor Pressure 478**
The Process of Vaporization 478 The Energetics of Vaporization 479 Vapor Pressure and Dynamic Equilibrium 481 Temperature Dependence of Vapor Pressure and Boiling Point 483 The Critical Point: The Transition to an Unusual State of Matter 487
- 11.6 Sublimation and Fusion 487**
Sublimation 487 Fusion 488 Energetics of Melting and Freezing 488
- 11.7 Heating Curve for Water 489**
- 11.8 Phase Diagrams 491**
The Major Features of a Phase Diagram 491 Navigation within a Phase Diagram 492 The Phase Diagrams of Other Substances 493
- 11.9 Water: An Extraordinary Substance 494**

REVIEW Self-Assessment 496 Key Learning Outcomes 497
Key Terms 497 Key Concepts 497 Key Equations and Relationships 498

EXERCISES Review Questions 498 Problems by Topic 499
Cumulative Problems 501 Challenge Problems 502 Conceptual Problems 502 Questions for Group Work 503 Data Interpretation and Analysis 503 Answers to Conceptual Connections 503

12 Crystalline Solids and Modern Materials 505



- 12.1 Friday Night Experiments: The Discovery of Graphene 505**
- 12.2 Crystalline Solids: Determining Their Structures by X-Ray Crystallography 506**
- 12.3 Crystalline Solids: Unit Cells and Basic Structures 508**
The Unit Cell 508 Closest-Packed Structures 514
- 12.4 Crystalline Solids: The Fundamental Types 516**
Molecular Solids 517 Ionic Solids 517 Atomic Solids 518
- 12.5 The Structures of Ionic Solids 519**
- 12.6 Network Covalent Atomic Solids: Carbon and Silicates 520**
Carbon 521 Silicates 523
- 12.7 Ceramics, Cement, and Glass 523**
Ceramics 523 Cement 524 Glass 524
- 12.8 Semiconductors and Band Theory 525**
Molecular Orbitals and Energy Bands 525 Doping: Controlling the Conductivity of Semiconductors 526
- 12.9 Polymers and Plastics 527**
- REVIEW** Self-Assessment 529 Key Learning Outcomes 530
Key Terms 530 Key Concepts 531 Key Equations and Relationships 531
- EXERCISES** Review Questions 531 Problems by Topic 532
Cumulative Problems 535 Challenge Problems 535 Conceptual Problems 536 Questions for Group Work 536 Data Interpretation and Analysis 537 Answers to Conceptual Connections 537

13 Solutions 539



- 13.1 Antifreeze in Frogs 539**
- 13.2 Types of Solutions and Solubility 540**
Nature's Tendency toward Mixing: Entropy 540 The Effect of Intermolecular Forces 541

13.3 Energetics of Solution Formation 544

Energy Changes in Solution Formation 545 Aqueous Solutions and Heats of Hydration 546

13.4 Solution Equilibrium and Factors Affecting Solubility 548

The Effect of Temperature on the Solubility of Solids 549
Factors Affecting the Solubility of Gases in Water 550

13.5 Expressing Solution Concentration 552

Molarity 553 Molality 554 Parts by Mass and Parts by Volume 554 Mole Fraction and Mole Percent 555

13.6 Colligative Properties: Vapor Pressure Lowering, Freezing Point Depression, Boiling Point Elevation, and Osmotic Pressure 558

Vapor Pressure Lowering 558 Vapor Pressures of Solutions Containing a Volatile (Nonelectrolyte) Solute 560 Freezing Point Depression and Boiling Point Elevation 563 Osmotic Pressure 566

13.7 Colligative Properties of Strong Electrolyte Solutions 569

Strong Electrolytes and Vapor Pressure 570 Colligative Properties and Medical Solutions 571

REVIEW Self-Assessment 572 Key Learning Outcomes 573
Key Terms 574 Key Concepts 574 Key Equations and Relationships 575

EXERCISES Review Questions 575 Problems by Topic 576
Cumulative Problems 579 Challenge Problems 581 Conceptual Problems 581 Questions for Group Work 582 Data Interpretation and Analysis 582 Answers to Conceptual Connections 583

14 Chemical Kinetics 585**14.1 Catching Lizards 585****14.2 Rates of Reaction and the Particulate Nature of Matter 586**

The Concentration of the Reactant Particles 586
The Temperature of the Reactant Mixture 587 The Structure and Orientation of the Colliding Particles 587

14.3 Defining and Measuring the Rate of a Chemical Reaction 587

Defining Reaction Rate 588 Measuring Reaction Rates 591

14.4 The Rate Law: The Effect of Concentration on Reaction Rate 593

Reaction Orders 593 Determining the Order of a Reaction 594
Reaction Order for Multiple Reactants 595

14.5 The Integrated Rate Law: The Dependence of Concentration on Time 598

Integrated Rate Laws 599 The Half-Life of a Reaction 603

14.6 The Effect of Temperature on Reaction Rate 606

The Arrhenius Equation 606 Arrhenius Plots: Experimental Measurements of the Frequency Factor and the Activation Energy 608 The Collision Model: A Closer Look at the Frequency Factor 611

14.7 Reaction Mechanisms 613

Rate Laws for Elementary Steps 613 Rate-Determining Steps and Overall Reaction Rate Laws 614 Mechanisms with a Fast Initial Step 615

14.8 Catalysis 618

Homogeneous and Heterogeneous Catalysis 620
Enzymes: Biological Catalysts 621

REVIEW Self-Assessment 623 Key Learning Outcomes 624
Key Terms 625 Key Concepts 625 Key Equations and Relationships 626

EXERCISES Review Questions 626 Problems by Topic 627
Cumulative Problems 632 Challenge Problems 634 Conceptual Problems 635 Questions for Group Work 636 Data Interpretation and Analysis 636 Answers to Conceptual Connections 637

15 Chemical Equilibrium 639**15.1 Fetal Hemoglobin and Equilibrium 639****15.2 The Concept of Dynamic Equilibrium 641****15.3 The Equilibrium Constant (*K*) 642**

Expressing Equilibrium Constants for Chemical Reactions 644
The Significance of the Equilibrium Constant 644
Relationships between the Equilibrium Constant and the Chemical Equation 645

15.4 Expressing the Equilibrium Constant in Terms of Pressure 647

Units of *K* 649

15.5 Heterogeneous Equilibria: Reactions Involving Solids and Liquids 650**15.6 Calculating the Equilibrium Constant from Measured Equilibrium Concentrations 651****15.7 The Reaction Quotient: Predicting the Direction of Change 653**

15.8 Finding Equilibrium Concentrations 656

Finding Equilibrium Concentrations from the Equilibrium Constant and All but One of the Equilibrium Concentrations of the Reactants and Products 656 Finding Equilibrium Concentrations from the Equilibrium Constant and Initial Concentrations or Pressures 657 Simplifying Approximations in Working Equilibrium Problems 661

15.9 Le Châtelier's Principle: How a System at Equilibrium Responds to Disturbances 665

The Effect of a Concentration Change on Equilibrium 665 The Effect of a Volume (or Pressure) Change on Equilibrium 667 The Effect of a Temperature Change on Equilibrium 670

REVIEW Self-Assessment 672 Key Learning Outcomes 673 Key Terms 674 Key Concepts 674 Key Equations and Relationships 675

EXERCISES Review Questions 675 Problems by Topic 676 Cumulative Problems 679 Challenge Problems 681 Conceptual Problems 681 Questions for Group Work 682 Data Interpretation and Analysis 682 Answers to Conceptual Connections 683

16 Acids and Bases 685**16.1 Batman's Basic Blunder 685****16.2 The Nature of Acids and Bases 686****16.3 Definitions of Acids and Bases 688**

The Arrhenius Definition 688 The Brønsted–Lowry Definition 689

16.4 Acid Strength and Molecular Structure 691

Binary Acids 691 Oxyacids 692

16.5 Acid Strength and the Acid Ionization Constant (K_a) 693

Strong Acids 693 Weak Acids 694 The Acid Ionization Constant (K_a) 694

16.6 Autoionization of Water and pH 696

Specifying the Acidity or Basicity of a Solution: The pH Scale 698 pOH and Other p Scales 699

16.7 Finding the $[H_3O^+]$ and pH of Strong and Weak Acid Solutions 700

Strong Acids 701 Weak Acids 701 Percent Ionization of a Weak Acid 706 Mixtures of Acids 707

16.8 Finding the $[OH^-]$ and pH of Strong and Weak Base Solutions 710

Strong Bases 710 Weak Bases 710 Finding the $[OH^-]$ and pH of Basic Solutions 711

16.9 The Acid–Base Properties of Ions and Salts 713

Anions as Weak Bases 714 Cations as Weak Acids 717 Classifying Salt Solutions as Acidic, Basic, or Neutral 718

16.10 Polyprotic Acids 720

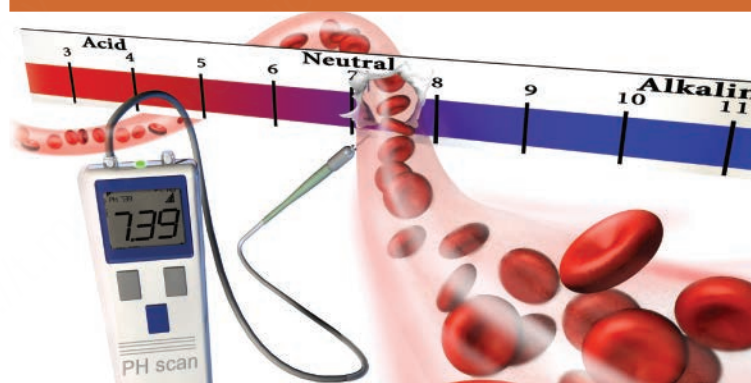
Finding the pH of Polyprotic Acid Solutions 721 Finding the Concentration of the Anions for a Weak Diprotic Acid Solution 723

16.11 Lewis Acids and Bases 725

Molecules That Act as Lewis Acids 725 Cations That Act as Lewis Acids 726

REVIEW Self-Assessment 727 Key Learning Outcomes 728 Key Terms 728 Key Concepts 729 Key Equations and Relationships 729

EXERCISES Review Questions 730 Problems by Topic 730 Cumulative Problems 734 Challenge Problems 735 Conceptual Problems 736 Questions for Group Work 736 Data Analysis and Interpretation 736 Answers to Conceptual Connections 737

17 Aqueous Ionic Equilibrium 739**17.1 The Danger of Antifreeze 739****17.2 Buffers: Solutions That Resist pH Change 740**

Calculating the pH of a Buffer Solution 742 The Henderson–Hasselbalch Equation 743 Calculating pH Changes in a Buffer Solution 746 Buffers Containing a Base and Its Conjugate Acid 750

17.3 Buffer Effectiveness: Buffer Range and Buffer Capacity 752

Relative Amounts of Acid and Base 752 Absolute Concentrations of the Acid and Conjugate Base 752 Buffer Range 753 Buffer Capacity 754

17.4 Titrations and pH Curves 755

The Titration of a Strong Acid with a Strong Base 756 The Titration of a Weak Acid with a Strong Base 760 The Titration of a Weak Base with a Strong Acid 765 The Titration of a Polyprotic Acid 766 Indicators: pH-Dependent Colors 767

17.5 Solubility Equilibria and the Solubility-Product Constant 769

K_{sp} and Molar Solubility 770 K_{sp} and Relative Solubility 772
The Effect of a Common Ion on Solubility 773 The Effect of
pH on Solubility 774

17.6 Precipitation 775

Q and K_{sp} 775 Selective Precipitation 777


17.7 Complex Ion Equilibria 778

The Effect of Complex Ion Equilibria on Solubility 780
The Solubility of Amphoteric Metal Hydroxides 782

REVIEW Self-Assessment 783 Key Learning Outcomes 784
Key Terms 785 Key Concepts 785 Key Equations and Relationships 786

EXERCISES Review Questions 786 Problems by Topic 787
Cumulative Problems 792 Challenge Problems 793 Conceptual
Problems 793 Questions for Group Work 794 Data Interpretation
and Analysis 794 Answers to Conceptual Connections 795

18 Free Energy and Thermodynamics 797

**18.1 Nature's Heat Tax: You Can't Win and You Can't Break Even 797****18.2 Spontaneous and Nonspontaneous Processes 798****18.3 Entropy and the Second Law of Thermodynamics 799**

Entropy 800 The Second Law of Thermodynamics 801
The Entropy Change upon the Expansion of an Ideal Gas 802

18.4 Entropy Changes Associated with State Changes 804

Entropy and State Change: The Concept 804 Entropy and
State Changes: The Calculation 806

18.5 Heat Transfer and Entropy Changes of the Surroundings 807

The Temperature Dependence of ΔS_{surr} 808 Quantifying
Entropy Changes in the Surroundings 809

18.6 Gibbs Free Energy 811

Defining Gibbs Free Energy 811 The Effect of ΔH , ΔS , and T
on Spontaneity 812

18.7 Entropy Changes in Chemical Reactions: Calculating ΔS°_{rxn} 815

Defining Standard States and Standard Entropy Changes 815
Standard Molar Entropies (S°) and the Third Law of

Thermodynamics 815 Calculating the Standard Entropy
Change (ΔS°_{rxn}) for a Reaction 819

18.8 Free Energy Changes in Chemical Reactions: Calculating ΔG°_{rxn} 820

Calculating Standard Free Energy Changes with $\Delta G^\circ_{rxn} = \Delta H^\circ_{rxn} - T\Delta S^\circ_{rxn}$ 820 Calculating ΔG°_{rxn} with Tabulated
Values of Free Energies of Formation 821 Calculating ΔG°_{rxn}
for a Stepwise Reaction from the Changes in Free Energy for
Each of the Steps 823 Making a Nonspontaneous Process
Spontaneous 824 Why Free Energy Is "Free" 824

18.9 Free Energy Changes for Nonstandard States: The Relationship between ΔG°_{rxn} and ΔG_{rxn} 826

Standard versus Nonstandard States 826 The Free Energy
Change of a Reaction under Nonstandard Conditions 826

18.10 Free Energy and Equilibrium: Relating ΔG°_{rxn} to the Equilibrium Constant (K) 829

The Temperature Dependence of the Equilibrium Constant 831

REVIEW Self-Assessment 832 Key Learning Outcomes 833
Key Terms 834 Key Concepts 834 Key Equations and Relationships 835

EXERCISES Review Questions 835 Problems by Topic 836
Cumulative Problems 839 Challenge Problems 841 Conceptual
Problems 842 Questions for Group Work 842 Data Interpretation
and Analysis 843 Answers to Conceptual Connections 843

19 Electrochemistry 845

**19.1 Lightning and Batteries 845****19.2 Balancing Oxidation–Reduction Equations 846****19.3 Voltaic (or Galvanic) Cells: Generating Electricity from Spontaneous Chemical Reactions 849**

The Voltaic Cell 849 Electrical Current and Potential
Difference 850 Anode, Cathode, and Salt Bridge 852
Electrochemical Cell Notation 852

19.4 Standard Electrode Potentials 854

Predicting the Spontaneous Direction of an Oxidation–
Reduction Reaction 859 Predicting Whether a Metal Will
Dissolve in Acid 861

19.5 Cell Potential, Free Energy, and the Equilibrium Constant 861

The Relationship between ΔG° and E°_{cell} 862 The
Relationship between E°_{cell} and K 864

19.6 Cell Potential and Concentration 865

Cell Potential under Nonstandard Conditions: The Nernst Equation 866 Concentration Cells 868

19.7 Batteries: Using Chemistry to Generate Electricity 870

Dry-Cell Batteries 870 Lead–Acid Storage Batteries 870 Other Rechargeable Batteries 871 Fuel Cells 872

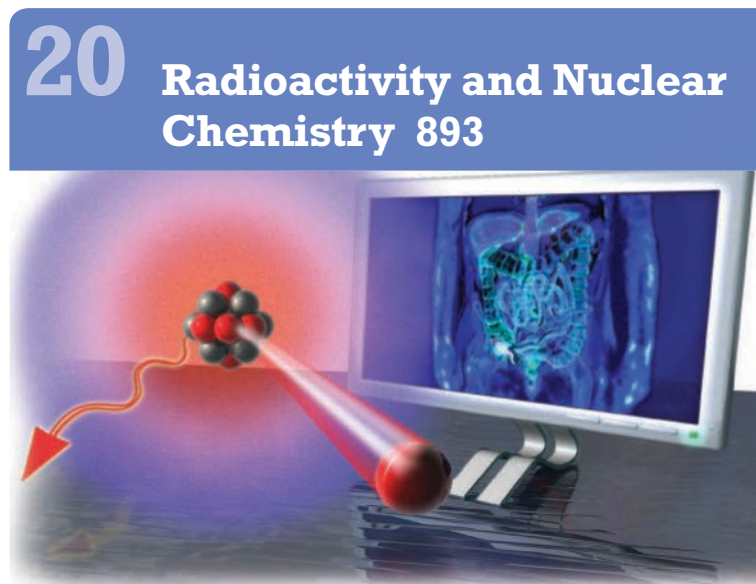
19.8 Electrolysis: Driving Nonspontaneous Chemical Reactions with Electricity 872

Predicting the Products of Electrolysis 875 Stoichiometry of Electrolysis 878

19.9 Corrosion: Undesirable Redox Reactions 879

REVIEW Self-Assessment 881 Key Learning Outcomes 883 Key Terms 883 Key Concepts 883 Key Equations and Relationships 884

EXERCISES Review Questions 885 Problems by Topic 885 Cumulative Problems 888 Challenge Problems 890 Conceptual Problems 890 Questions for Group Work 891 Data Interpretation and Analysis 891 Answers to Conceptual Connections 891

**20.1 Diagnosing Appendicitis 893****20.2 The Discovery of Radioactivity 894****20.3 Types of Radioactivity 895**

Alpha (α) Decay 896 Beta (β) Decay 897 Gamma (γ) Ray Emission 898 Positron Emission 898 Electron Capture 899

20.4 The Valley of Stability: Predicting the Type of Radioactivity 900

Magic Numbers 902 Radioactive Decay Series 902 The Integrated Rate Law 905 Radiocarbon Dating 907 Uranium/Lead Dating 909

20.5 Detecting Radioactivity 903**20.6 The Kinetics of Radioactive Decay and Radiometric Dating 904****20.7 The Discovery of Fission: The Atomic Bomb and Nuclear Power 910**

The Atomic Bomb 911 Nuclear Power: Using Fission to Generate Electricity 912

20.8 Converting Mass to Energy: Mass Defect and Nuclear Binding Energy 914

The Conversion of Mass to Energy 914 Mass Defect and Nuclear Binding Energy 915 The Nuclear Binding Energy Curve 916

20.9 Nuclear Fusion: The Power of the Sun 917**20.10 Nuclear Transmutation and Transuranium Elements 918****20.11 The Effects of Radiation on Life 919**


Acute Radiation Damage 920 Increased Cancer Risk 920 Genetic Defects 920 Measuring Radiation Exposure and Dose 920

20.12 Radioactivity in Medicine and Other Applications 922

Diagnosis in Medicine 922 Radiotherapy in Medicine 923 Other Applications for Radioactivity 924

REVIEW Self-Assessment 925 Key Learning Outcomes 926 Key Terms 926 Key Concepts 926 Key Equations and Relationships 927

EXERCISES Review Questions 928 Problems by Topic 928 Cumulative Problems 930 Challenge Problems 931 Conceptual Problems 932 Questions for Group Work 932 Data Interpretation and Analysis 933 Answers to Conceptual Connections 933

**21.1 Fragrances and Odors 935****21.2 Carbon: Why It Is Unique 936**

Carbon's Tendency to Form Four Covalent Bonds 936 Carbon's Ability to Form Double and Triple Bonds 936 Carbon's Tendency to Catenate 937

21.3 Hydrocarbons: Compounds Containing Only Carbon and Hydrogen 937

Drawing Hydrocarbon Structures 938 Stereoisomerism and Optical Isomerism 941

21.4 Alkanes: Saturated Hydrocarbons 944

Naming Alkanes 945

21.5 Alkenes and Alkynes 948

Naming Alkenes and Alkynes 950 Geometric (Cis–Trans) Isomerism in Alkenes 952

21.6 Hydrocarbon Reactions 953

Reactions of Alkanes 954 Reactions of Alkenes and Alkynes 954

21.7 Aromatic Hydrocarbons 956

Naming Aromatic Hydrocarbons 957 Reactions of Aromatic Compounds 958

21.8 Functional Groups 960**21.9 Alcohols 961**

Naming Alcohols 961 About Alcohols 961 Alcohol Reactions 961

21.10 Aldehydes and Ketones 963

Naming Aldehydes and Ketones 964 About Aldehydes and Ketones 964 Aldehyde and Ketone Reactions 965

21.11 Carboxylic Acids and Esters 966

Naming Carboxylic Acids and Esters 966 About Carboxylic Acids and Esters 966 Carboxylic Acid and Ester Reactions 967

21.12 Ethers 968

Naming Ethers 968 About Ethers 968

21.13 Amines 968

Amine Reactions 969

REVIEW Self-Assessment 969 Key Learning Outcomes 970 Key Terms 970 Key Concepts 971 Key Equations and Relationships 972

EXERCISES Review Questions 973 Problems by Topic 974 Cumulative Problems 979 Challenge Problems 981 Conceptual Problems 982 Questions for Group Work 982 Data Interpretation and Analysis 983 Answers to Conceptual Connections 983

22 Transition Metals and Coordination Compounds 985

**22.1 The Colors of Rubies and Emeralds 985****22.2 Properties of Transition Metals 986**

Electron Configuration 986 Atomic Size 987 Ionization Energy 988 Electronegativity 988 Oxidation State 989

22.3 Coordination Compounds 990

Ligands 990 Coordination Numbers and Geometries 992 Naming Coordination Compounds 993

22.4 Structure and Isomerization 995

Structural Isomerism 995 Stereoisomerism 996

22.5 Bonding in Coordination Compounds 999

Valence Bond Theory 1000 Crystal Field Theory 1000 Octahedral Complexes and d Orbital Splitting 1000

22.6 Applications of Coordination Compounds 1005

Chelating Agents 1005 Chemical Analysis 1005 Coloring Agents 1005 Biomolecules 1005

REVIEW Self-Assessment 1008 Key Learning Outcomes 1008 Key Terms 1009 Key Concepts 1009 Key Equations and Relationships 1009

EXERCISES Review Questions 1010 Problems by Topic 1010 Cumulative Problems 1011 Challenge Problems 1012 Conceptual Problems 1012 Questions for Group Work 1013 Data Interpretation and Analysis 1013 Answers to Conceptual Connections 1013

Appendix I Common Mathematical Operations in Chemistry A-1

- A Scientific Notation A-1
- B Logarithms A-3
- C Quadratic Equations A-5
- D Graphs A-5

Appendix II Useful Data A-7

- A Atomic Colors A-7
- B Standard Thermodynamic Quantities for Selected Substances at 25 °C A-7
- C Aqueous Equilibrium Constants A-13
- D Standard Electrode Potentials at 25 °C A-17
- E Vapor Pressure of Water at Various Temperatures A-18

Appendix III Answers to Selected End-of-Chapter Problems A-19

Appendix IV Answers to In-Chapter Practice Problems A-53

Glossary G-1**Credits C-1****Index I-1**

Preface

To the Student

In this book, I tell the story of chemistry, a field of science that has not only revolutionized how we live (think of drugs designed to cure diseases or fertilizers that help feed the world), but also helps us to understand virtually everything that happens all around us all the time. The core of the story is simple: Matter is composed of particles, and the structure of those particles determines the properties of matter. Although these two ideas may seem familiar to you as a twenty-first-century student, they were not so obvious as recently as 200 years ago. Yet, they are among the most powerful ideas in all of science. You need not look any further than the advances in biology over the last half-century to see how the particulate view of matter drives understanding. In the last 50 years, we have learned how all living things derive much of what they are from the particles (especially proteins and DNA) that compose them. I invite you to join the story as you read this book. Your part in its unfolding is yet to be determined, and I wish you the best as you start your journey.

Nivaldo J. Tro
tro@westmont.edu

To the Professor

First and foremost, thanks to all of you who adopted this book in its first edition. You made this book the market-leading atoms-first book. I am grateful beyond words. Second, know that I have listened carefully to your feedback about the first edition. The changes you see in this edition are the direct result of your input, as well as my own experience using the book in my general chemistry courses. If you are a reviewer or have contacted me directly, you will likely see your suggestions reflected in the changes I have made. Thank you.

In spite of the changes in this edition, the goal of the text remains the same: *to tell the story of chemistry in the most compelling way possible*. This book grew out of the *atoms-first* movement in General Chemistry. In a practical sense, the main thrust of this movement is a reordering of topics so that atomic theory and bonding models come much earlier than in the traditional approach. A primary rationale for this approach is for students to understand the theory and framework behind the chemical “facts” they are learning. For example, in the traditional approach students learn early that magnesium atoms tend to form ions with a charge of 2+. They don’t understand *why* until much later (when they get to quantum theory). In contrast, in an atoms-first approach, students learn quantum theory first and understand immediately why magnesium atoms form ions with a charge of 2+. In this way, students see chemistry as a coherent picture and not just a jumble of disjointed facts.

From my perspective, the atoms-first approach is better understood—but not in terms of topic order—but in terms of emphasis. Professors who teach with an atoms-first approach generally emphasize: (1) the particulate

nature of matter and (2) the connection between the *structure* of atoms and molecules and their *properties* (or their function). The result of this emphasis is that the topic order is rearranged to make these connections earlier, stronger, and more often than the traditional approach. Consequently, I chose to name this book *Chemistry: Structure and Properties*, and have not included the phrase *atoms-first* in the title. From my perspective, the topic order grows out of the particulate emphasis, not the other way around.

In addition, by making the relationship between structure and properties the emphasis of the book, I extend that emphasis beyond just the topic order in the first half of the book. For example, in the chapter on acids and bases, a more traditional approach puts the relationship between the structure of an acid and its acidity toward the end of the chapter, and many professors even skip this material. In this book, I cover this relationship early in the chapter, and I emphasize its importance in the continuing story of structure and properties. Similarly, in the chapter on free energy and thermodynamics, a traditional approach does not emphasize the relationship between molecular structure and entropy. In this book, however, I emphasize this relationship and use it to tell the overall story of entropy and its ultimate importance in determining the direction of chemical reactions. In this edition, I have also changed the topic order in the gases chapter, so that the particulate view inherent in kinetic molecular theory comes at the beginning of the chapter, followed by the gas laws and the rest of the chapter content. In this way, students can understand the gas laws and all that follows in terms of the particulate model.

Throughout the course of writing this book and in conversations with many of my colleagues, I have also come to realize that the atoms-first approach has some unique challenges. For example, how do you teach quantum theory and bonding (with topics like bond energies) when you have not covered thermochemistry? Or how do you find laboratory activities for the first few weeks if you have not covered chemical quantities and stoichiometry? I have sought to develop solutions to these challenges in this book. For example, I include a section on energy and its units in Chapter E, “Essentials: Units, Measurement, and Problem Solving.” This section introduces changes in energy and the concepts of exothermicity and endothermicity. These topics are therefore in place when you need them to discuss the energies of orbitals and spectroscopy in Chapter 2, “Periodic Properties of the Elements,” and bond energies in Chapter 5, “Chemical Bonding I: Drawing Lewis Structures and Determining Molecular Shapes.” Similarly, I introduce the mole concept in Chapter 1; this placement allows not only for a more even distribution of quantitative homework problems, but also for laboratory exercises that require use of the mole concept.

In addition, because I strongly support the efforts of my colleagues at the Examinations Institute of the American Chemical Society, and because I have sat on several committees that write the ACS General Chemistry exam, I have ordered the chapters in this book so that they can be used with those exams in their present form. The end result is a table of contents

that emphasizes structure and properties, while still maintaining the overall traditional division of first- and second-semester topics.

Some of the most exciting changes and additions to this edition are in the media associated with the book. To enhance student engagement in your chemistry course, I have added approximately 37 new Key Concept Videos and 50 new Interactive Worked Examples to the media package, which now contains over 150 interactive videos. There is a more detailed description of these videos in the following section entitled “New to This Edition.” In my courses, I employ readings from the book and these videos to implement a *before, during, after* strategy for my students. My goal is to *engage students in active learning before class, during class, and after class*. Recent research has conclusively demonstrated that students learn better when they are active as opposed to passively listening and simply taking in content.

To that end, in addition to a reading assignment from the text, I assign a key concept video *before* each class session. Reading sections from the text in conjunction with viewing the video introduces students to a key concept for that day and gets them thinking about it before they come to class. Since the videos and the book are so closely linked, students get a seamless presentation of the content. *During* class, I expand on the concept and use *Learning Catalytics™* in MasteringChemistry™ to question my students. Instead of passively listening to a lecture, they interact with the concepts through questions that I pose. Sometimes I ask my students to answer individually, other times in pairs or even groups. This approach has changed my classroom. Students engage in the material in new ways. They have to think, process, and interact. *After* class, I give them another assignment, often an Interactive Worked Example with a follow-up question. They put their new skills to work in solving this assignment. Finally, I assign a weekly problem set in which they have to apply all that they have learned to solve a variety of end-of-chapter problems.

The results have been fantastic. Instead of just starting to learn the material the night before a problem set is due, my students are engaged in chemistry before, during, and after class. I have seen evidence of their improved learning through increases in their scores on the American Chemical Society Standard General Chemistry Exam, which I always administer as the final exam for my course.

For those of you who have used my other general chemistry book (*Chemistry: A Molecular Approach*), you will find that this book is a bit shorter and more focused and streamlined than that one. I have shortened some chapters, divided others in half, and completely eliminated three chapters (“Biochemistry,” “Chemistry of the Nonmetals,” and “Metals and Metallurgy”). These topics are simply not being taught much in many general chemistry courses. *Chemistry: Structures and Properties* is a leaner and more efficient book that fits well with current trends that emphasize depth over breadth. Nonetheless, the main features that have made *Chemistry: A Molecular Approach* a success continue in this book. For example, strong problem-solving pedagogy, clear and concise writing, mathematical and chemical rigor, and dynamic art are all vital components of this book.

I hope that this book supports you in your vocation of teaching students chemistry. I am increasingly convinced of the importance of our task. Please feel free to email me with any questions or comments about the book.

Nivaldo J. Tro
tro@westmont.edu

New to This Edition

- Conceptual Connections and Self-Assessment Quizzes at the end of each chapter in the book are now embedded and interactive in eText 2.0. The interactive quizzes help students to study and test their understanding in real time. Quizzes are algorithmically coded into MasteringChemistry™ to allow students to practice the types of questions they will encounter on the ACS or other exams.
- I added a new chapter, Chapter E, “Essentials: Units, Measurement, and Problem Solving.” This material, located in Appendices I and II and Chapter 2 in the first edition, was moved to the front of the book to provide a foundation for students who need some review in these areas.
- I revised Chapter 1, “Atoms,” to include a more personal introduction that documents my own introduction into the world of atoms. I also moved the mole concept for atoms, covered in Chapter 2 in the first edition, into Chapter 1 in the second edition.
- I moved phase diagrams into Chapter 11, “Liquids, Solids, Intermolecular Forces, and Phase Diagrams,” to immediately follow the coverage of liquids, solids, and intermolecular forces.
- The chemistry of modern materials is now covered in Chapter 12, “Crystalline Solids and Materials,” which includes new topics as well as the materials content found in other parts of the book in the first edition.
- With the help of my colleagues, Thomas Greenbowe (University of Oregon), Kristin Ziebert (Oregon State University), and Michael Everest (Westmont College), I added two new categories of end-of-chapter questions designed to help students build “twenty-first-century skills.” The first new category of questions, Data Interpretation and Analysis, presents real data in real-life situations and asks students to analyze that data. These in-depth exercises give students much needed practice in reading graphs, digesting tables, and making data-driven decisions. The second new category of questions, Questions for Group Work, encourages students to work with their peers in small groups. The questions can be assigned in or out of the classroom to foster collaborative learning and to allow students to work together in teams to solve problems.
- I added 37 new Key Concept Videos and 50 new Interactive Worked Examples to the media package that accompanies the book. This book now has a video library of over 150 interactive videos designed to help professors engage their students in active learning. These videos are also embedded in the eText 2.0 version of the book.
 - The Key Concept Videos are brief (3 to 5 minutes), and each one introduces a key concept from a chapter. The student does not just passively listen to the video; the video stops in the middle and poses a question to the student. The student must answer the question before the video continues. Each video also includes a follow-up question that is assignable in MasteringChemistry™.
 - The Interactive Worked Examples are similar in concept, but instead of explaining a key concept, each video walks the student through one of the in-chapter worked examples from the book. Like the Key Concept Videos, Interactive Worked Examples stop in the middle and force the student to interact by completing a step in the example. Each example also has a follow-up question that is assignable in MasteringChemistry™. The power of interactivity

to make connections in problem solving is immense. I did not quite realize this power until we started making the Interactive Worked Examples, and I saw how I could use the animations to make connections that are just not possible on the static page.

- In order to share best practices for using all of the rich print and media resources that are specific to this title with your students most effectively, professors across the country teaching with my materials curated NEW Ready-To-Go Teaching Modules for this edition. These modules provide instructors with a roadmap for teaching the toughest topics in chemistry.
- There are 13 new Conceptual Connection questions in the book. These questions make reading an active experience by asking students short questions designed to help them determine if they have understood what they are reading. All the Conceptual Connections in the book are embedded and interactive in eText 2.0 with answer-specific feedback.
- All the data in the book has been updated to reflect the most recent measurements available. Examples include Figure 7.2, “Carbon Dioxide in the Atmosphere,” Figure 7.3, “Global Temperatures,” and Figure 14.19, “Ozone Depletion in the Antarctic Spring.”
- I revised the art program throughout to move key points out of the caption and into the art itself. Changes have been made in figures in every chapter in the book. For example, see Figure 5.6, “Hybridization,” Figure 8.2, “Concentrated and Dilute Solutions,” and Figure 8.3, “Preparing a 1.00 M NaCl Solution.”
- I have revised several chapter-opening sections and (or) the corresponding art, including Sections E.1, 1.1, 9.1, 11.1, 12.1, and 18.1.
- In Section 7.5, “Stoichiometric Relationships: Limiting Reactant, Theoretical Yield, Percent Yield, and Reactant in Excess,” you will find a new subsection (“Reactant in Excess”) and a new in-chapter worked example (Example 7.8, “Reactant in Excess”) that address the amount of excess reagent left over after a reaction.
- In Section 8.7, “Acid–Base Reactions,” I added new content on acid–base reactions involving a weak acid and a new worked example (Example 8.12, “Writing Equations for Acid–Base Reactions Involving a Weak Acid”).
- In Section 8.9, “Oxidation–Reduction Reactions,” I added new content on the activity series for metals, including a new worked example (Example 8.18, “Predicting Spontaneous Redox Reactions”).
- I reorganized Chapter 10, “Gases,” so that kinetic molecular theory is covered earlier in order to emphasize the particulate nature of gases.
- There is a new worked example in Section 12.3, “Crystalline Solids: Unit Cells and Basic Structures” (Example 12.2, “Calculating the Packing Efficiency of a Unit Cell”).
- I added a new section (Section 18.4, “Entropy Changes Associated with State Changes”) to Chapter 18, “Free Energy and Thermodynamics,” that includes a subsection on calculating the entropy changes associated with state changes. The section includes a new worked example (Example 18.2, “Calculating ΔS for a State Change”) and new content on reversible and irreversible processes.
- Several sections and tables in Chapter 20, “Radioactivity and Nuclear Chemistry,” have been modified and updated including Sections 20.3 and 20.5 and Tables 20.1 and 20.4.

- The MasteringChemistry™ data indicating which problems give students the most trouble and where they need the most assistance for all end-of-chapter problems were reviewed and taken into account in revising the problems. Over 75% of the section problems have wrong answer-specific feedback.

Acknowledgments

The book you hold in your hands bears my name on the cover, but I am really only one member of a large team that carefully crafted this book. Most importantly, I thank my editor, Terry Haugen. Terry is a great editor and friend who really gets the *atoms-first* approach. He gives me the right balance of freedom and direction and always supports my efforts. Thanks Terry for all you have done for me and for the progression of the *atoms-first* movement throughout the world. Thanks also to Jennifer Hart, who has worked with me on multiple editions of several books. Jennifer, your guidance, organizational skills, and wisdom are central to the success of my projects, and I am eternally grateful. I also thank Erin Mulligan, who has worked with me on several editions of multiple projects. Erin is an outstanding developmental editor, a great thinker, and a good friend. We work together almost seamlessly now, and I am lucky and grateful to have Erin on my team. I am also grateful to my media editor, Jackie Jakob. Jackie is the mastermind behind all things media and has been central to the development of the vast library of digital assets that now accompany this book. Thank you Jackie for your expertise, creativity, guidance, and attention to detail. You are a pleasure to work with.

I am also grateful for my content producers, Mae Lum, and Lisa Pierce. Their expertise and guidance shepherded this revision from start to finish. I am also grateful to Jeanne Zalesky, editor-in-chief for chemistry. She has supported me and my projects and allowed me to succeed. Thanks also to Adam Jaworski. His skills, competence, and wisdom continue to lead the science team at Pearson forward. And of course, I am continually grateful for Paul Corey, with whom I have now worked for over 16 years and 13 projects. Paul is a man of incredible energy and vision, and it is my great privilege to work with him. Paul told me many years ago (when he first signed me on to the Pearson team) to dream big, and then he provided the resources I needed to make those dreams come true. *Thanks, Paul.*

I am also grateful to Chris Barker and Elizabeth Bell who have worked hard to market my books. Chris and I go way back, and I always love working with him. Elizabeth has brought great energy and ideas to marketing and is always thoughtful and responsive to me in everything we do. I also thank Quade Paul who makes my ideas come alive with his art. Quade and I have been working together since the first edition of my first book with Pearson and I owe a special debt of gratitude to him. I also thank Francesca Monaco and her co-workers at Code Mantra. I am a picky author and Francesca is endlessly patient and a true professional. I am also greatly indebted to my copy editor, Betty Pessagno, for her dedication and professionalism, and to Eric Schrader for his exemplary photo research.

I acknowledge the great work of my colleague Kathy Thrush Shaginaw, who put countless hours into developing the solutions manual. She is exacting, careful, and consistent, and I am so grateful for her hard work. I acknowledge the support of my colleagues, Allan Nishimura, Kristi Lazar, David Marten, Stephen Contakes, Michael Everest, Amanda Silberstein,

and Carrie Hill, who have supported me in my department while I worked on this book. I am also grateful to Mark Sargent, the provost of Westmont College, who has allowed me the time and space to work on my books. Thank you, Mark, for allowing me to pursue my gifts and my vision. You are an outstanding leader and a true friend.

I am also grateful to those who have supported me personally. First on that list is my wife, Ann. Her patience and love for me are beyond description, and without her, this book would never have been written. I am also indebted to my children, Michael, Ali, Kyle, and Kaden, whose smiling faces and love of life always inspire me. I come from a large Cuban family whose closeness and support most people would envy. Thanks to my parents, Nivaldo and Sara; my siblings, Sarita, Mary, and Jorge; my siblings-in-law, Nachy, Karen, and John; my nephews and nieces, Germain, Danny, Lisette, Sara, and Kenny. These are the people with whom I celebrate life.

I would like to thank all of the general chemistry students who have been in my classes throughout my 26 years as a professor at Westmont College. You have taught me much about teaching that is now in this book. I am especially grateful to Michael Tro who put in many hours proofreading my manuscript, working problems and quiz questions, and organizing art codes and appendices. Michael, you are an amazing kid—it is my privilege to have you work with me on this project. I am very grateful to Thomas Greenbowe, Michael Everest, and Ali Sezer who played particularly important roles in many of the new features of this edition. I am also grateful to the accuracy reviewers Christiane Barnes, Rachel Campbell, Alton Hassell, Deborah Herrington, Clifford LeMaster, and Charles McLaughlin who tirelessly checked page proofs for correctness.

Lastly, I am indebted to the many reviewers, listed on the following pages, whose ideas are imbedded throughout this book. They have corrected me, inspired me, and sharpened my thinking on how best to emphasize structure and properties while teaching chemistry. I deeply appreciate their commitment to this project.

Reviewers of the Second Edition

Jim Bann, *Wichita State University*
 David Boatright, *University of West Georgia*
 Bryan Breyfogle, *Missouri State University*
 Amanda Brindley, *University of California Irvine*
 Rebekah Brosky, *Florida Gulf Coast University*
 Jeff Bryan, *University of Wisconsin, La Crosse*
 Michael Burand, *Oregon State University*
 Charles Burns, *Wake Technical Community College*
 Amina El-Ashmawy, *Collin College*
 Leslie Farris, *University of Massachusetts Lowell*
 Kenneth Friedrich, *Portland Community College*
 Matthew Gerner, *University of Arkansas*
 Tracy Hamilton, *University of Alabama Birmingham*
 Hal Harris, *University of Missouri, St Louis*
 Eric Hawrelak, *Bloomsburg University*
 Maria Korolev, *University of Florida*
 Alistair Lees, *Binghamton University*
 Dawn Richardson, *Collin College*
 Jason Ritchie, *University of Mississippi*

Mary Setzer, *University of Alabama Huntsville*
 Carrie Shepler, *Georgia Institute of Technology*
 Uma Swamy, *Florida International University*
 Steven Tait, *Indiana University Bloomington*
 Nicolay Tsarevsky, *Southern Methodist University*
 Melanie Veige, *University of Florida*
 John Vincent, *University of Alabama*
 Lin Zhu, *Indiana University-Purdue University Indianapolis*
 Kristin Ziebart, *Oregon State University*

Focus Group Participants:

Ericka Barnes, *Southern Connecticut State University*
 James Beil, *Lorain County Community College*
 David Boatright, *University of West Georgia*
 Jeff Bryan, *University of Wisconsin, La Crosse*
 Allen Easton, *Georgia Highlands College*
 Maria Korolev, *University of Florida*
 Greg Peters, *University of Findlay*
 Kathryn Plath, *University of Colorado Boulder*
 Ali Sezer, *California University of Pennsylvania*
 Cathrine Southern, *DePaul University*
 John Vincent, *University of Alabama*

Reviewers of the First Edition

Binyomin Abrams, *Boston University*
 Keith Baessler, *Suffolk County Community College*
 David Ballantine, *Northern Illinois University*
 Jim Bann, *Wichita State University*
 Ericka Barnes, *Southern Connecticut State University*
 Mufeed Basti, *North Carolina A&T State University*
 Sharmistha Basu-Dutt, *University of West Georgia*
 Richard Bell, *Pennsylvania State University, Altoona*
 Shannon Biros, *Grand Valley State University*
 David Boatright, *University of West Georgia*
 John Breen, *Providence College*
 Bryan Breyfogle, *Missouri State University*
 Stacey Bridges, *University of California, San Diego*
 Nicole Brinkman, *University of Notre Dame*
 Charles Burns, *Wake Technical Community College*
 Jon Camden, *University of Tennessee Knoxville*
 Mark Campbell, *United States Naval Academy*
 Tara Carpenter, *University of Maryland*
 Kathleen Carrigan, *Portland Community College*
 Sandra Chimon-Peszek, *DePaul University*
 William Cleaver, *University of Texas Arlington*
 Margaret Czerw, *Raritan Valley Community College*
 Robert DaLuca, *Michigan State University*
 David Dearden, *Brigham Young University*
 Alyse Dilts, *Harrisburg Area Community College*
 Sarah Dimick Gray, *Metropolitan State University*
 Dede Dunlavy, *New Mexico State University*
 Barrett Eichler, *Augustana College*
 Amina El-Ashmawy, *Collin College*

Mark Ellison, *Ursinus College*
 Robert Ertl, *Marywood University*
 Sylvia Esjornson, *Southwestern Oklahoma State University*
 Renee Falconer, *Colorado School of Mines*
 Richard Farrer, *Colorado State University, Pueblo*
 Leslie Farris, *University of Massachusetts, Lowell*
 Gregory Ferrene, *Illinois State University*
 Debbie Finocchio, *University of San Diego*
 Andy Frazer, *University of Central Florida*
 Lee Friedman, *University of Maryland*
 Kenneth Friedrich, *Portland Community College*
 Tony Gambino, *State College of Florida*
 Christine Gaudinski, *Aims Community College*
 Nicole Grove, *Western Wyoming Community College*
 Alex Grushow, *Rider University*
 Brian Gute, *University of Minnesota, Duluth*
 Margie Haak, *Oregon State University*
 Janet Haff, *Suffolk County Community College*
 Tracy Hamilton, *University of Alabama, Birmingham*
 Harold Harris, *University of Missouri, St. Louis*
 Antony Hascall, *Northern Arizona University*
 Eric Hawrelak, *Bloomsburg University*
 David Henderson, *Trinity College*
 Susan Hendrickson, *University of Colorado, Boulder*
 Renee Henry, *University of Colorado, Colorado Springs*
 Deborah Hokien, *Marywood University*
 Donna Iannotti, *Brevard College*
 Amy Irwin, *Monroe Community College*
 Jim Jeitler, *Marietta College*
 David Jenkins, *University of Tennessee*
 Richard Jew, *University of North Carolina*
 Mary Jo Bojan, *Pennsylvania State University*
 Milt Johnsto, *University of South Florida*
 Cynthia Judd, *Palm Beach State College*
 Jason Kahn, *University of Maryland*
 Rick Karpeles, *University of Massachusetts, Lowell*
 Daniel Kelly, *Indiana University, Northwest*
 Scott Kennedy, *Anderson University*
 Farooq Khan, *University of West Virginia*
 Angela King, *Wake Forest University*
 John Kiser, *Western Piedmont Community College*
 Daniel Knauss, *Colorado School of Mines*
 Vivek Kumar, *Suffolk County Community College*
 Joe Lanzafame, *Rochester Institute of Technology*
 Willem Leenstra, *University of Vermont*
 Zhengrong Li, *Southern Louisiana University*
 Fiona Lihs, *Estrella Mountain Community College*
 Doug Linder, *Southwestern Oklahoma State University*
 Christian Madu, *Collin College*
 Rita Maher, *Richland College*
 Marcin Majda, *University of California, Berkeley*
 Vanessa McCaffrey, *Albion College*
 Tracy McGill, *Emory University*
 Gail Meyer, *University of Tennessee, Chattanooga*

Daniel Moriarty, *Siena College*
 Gary Mort, *Lane Community College*
 Douglas Mulford, *Emory University*
 Richard Mullins, *Xavier University*
 Maureen Murphy, *Huntington College*
 Clifford Murphy, *Roger Williams University*
 Anne-Marie Nickel, *Milwaukee School of Engineering*
 Chifuru Noda, *Bridgewater State University*
 Daphne Norton, *Emory University*
 Jodi O'Donnell, *Siena College*
 Stacy O'Riley, *Butler University*
 John Ondov, *University of Maryland*
 Edith Osborne, *Angelo State University*
 Jessica Parr, *University of Southern California*
 Yasmin Patel, *Kansas State University*
 Thomas Pentecost, *Grand Valley State University*
 David Perdian, *Broward College*
 Robert Pike, *College of William and Mary*
 Lynmarie Posey, *Michigan State University*
 Karen Pressprich, *Clemson University*
 Curtis Pulliam, *Utica College*
 Jayashree Ranga, *Salem State University*
 Patricia Redden, *Saint Peter's University*
 Dawn Richardson, *Collin College*
 Robert Rittenhouse, *Central Washington University*
 Al Rives, *Wake Forest University*
 Michael Roper, *Frontrange Community College*
 Steven Rowley, *Middlesex Community College*
 Raymond Sadeghi, *University of Texas, San Antonio*
 Sharadha Sambasivan, *Suffolk County Community College*
 Jason Schmeltzer, *University of North Carolina*
 Janet Schrenk, *University of Massachusetts, Lowell*
 Stephen Schwaneveldt, *Clemson University*
 Ali Sezer, *California University of Pennsylvania*
 Carrie Shepler, *Georgia Institute of Technology*
 Kim Shih, *University of Massachusetts, Lowell*
 Sarah Siegel, *Gonzaga University*
 Gabriela Smeureanu, *Hunter College*
 Jacqueline Smits, *Bellevue Community College*
 Jen Snyder, *Ozark Technical College*
 Thomas Sommerfeld, *Southern Louisiana University*
 David Son, *Southern Methodist University*
 Tom Sorenson, *University of Wisconsin, Milwaukee*
 Allison Soult, *University of Kentucky*
 Catherine Southern, *DePaul University*
 Kimberly Stieglitz, *Roxbury Community College*
 Shane Street, *University of Alabama*
 John Stubbs, *University of New England*
 Kate Swanson, *University of Minnesota, Duluth*
 Steven Tait, *Indiana University, Bloomington*
 Dennis Taylor, *Clemson University*
 Stephen Testa, *University of Kentucky*
 Tom Ticich, *Centenary College of Louisiana*
 Nicolay Tsarevsky, *Southern Methodist University*

Lori Van Der Sluys, *Pennsylvania State University*
Col. Michael Van Valkenburg, *United States Air Force Academy*
Michael Vannatta, *West Virginia University*
Alan VanOrden, *Colorado State University*
Josh Wallach, *Old Dominion University*
Mark Watry, *Spring Hill College*
Jeffrey Webb, *Southern Connecticut State University*
Paula Weiss, *Oregon State University*
Wayne Weslowski, *University of Arizona*
Allison Wind, *Middle Tennessee State University*
Paul Wine, *Georgia Institute of Technology*

Lioudmila Woldman, *Florida State College, Jacksonville*
Kimberly Woznack, *California University of Pennsylvania*
Dan Wright, *Elon University*
Darrin York, *Rutgers University*
Susan Young, *University of Massachusetts, Lowell*
David Zax, *Cornell University*
Hong Zhao, *Indiana University-Purdue University, Indianapolis*
Lin Zhu, *Indiana University-Purdue University, Indianapolis*
Kristin Ziebart, *Oregon State University*
Brian Zoltowski, *Southern Methodist University*
James Zubricky, *University of Toledo*

This page intentionally left blank

Why Structure and Properties?



Dear Colleague,

In recent years, many chemistry professors, myself among them, have begun teaching their General Chemistry courses with an atoms-first approach. On the surface, this approach may seem like a mere reordering of topics, so that atomic theory and bonding theories come earlier than they do in the traditional approach. A rationale for this reordering is that students should understand the theory and framework behind the chemical “facts” they are learning. For example, in the traditional approach, students learn early that magnesium atoms tend to form ions with a charge of $2+$. However, they don’t understand *why* until much later (when they get to quantum theory). In an atoms-first approach, students learn quantum theory first and are therefore able to understand why magnesium atoms form ions with a charge of $2+$ when they learn this fact. In this way, students see chemistry as a more coherent picture and not just a jumble of disjointed facts.

From my perspective, as an author and a teacher who teaches an atoms-first class, however, the atoms-first movement is more than just a reordering of topics. To me, the atoms-first movement is a result of the growing emphasis in chemistry courses on the two main ideas of chemistry, which are: 1) that matter is particulate, and 2) that the structure of the particles that compose matter determines its properties. In other words, the atoms-first movement is—at its core—an attempt to tell the story of chemistry in a more unified and thematic way. As a result, an atoms-first textbook must be more than a rearrangement of topics: it must tell the story of chemistry through the lens of the particulate model of matter. That is the goal I attempted to accomplish with *Chemistry: Structure and Properties*. Thanks to all of you who made the first edition the best-selling atoms-first book on the market. With this, the second edition, I continue to refine and improve on the approach taken in the first edition. My continuing hope is that students will recognize the power and beauty of the simple ideas that lie at the core of chemistry, and that they learn to apply them to see and understand the world around them in new ways.

“To me, the atoms-first movement is a result of the growing emphasis in chemistry courses on the two main ideas of chemistry: 1) that matter is particulate, and 2) that the structure of the particles that compose matter determines its properties.”

N. J. Tro

Structure and properties: A unified theme through the entire book

Section 1.1 – Introduction to the theme

1.1 A Particulate View of the World: Structure Determines Properties

As I sat in the “omnimover” and listened to the narrator’s voice telling me that I was shrinking down to the size of an atom, I grew apprehensive but curious. Just minutes before, while waiting in line, I witnessed what appeared to be full-sized humans entering a microscope and emerging from the other end many times smaller. I was 7 years old and I was about to ride *Adventure Through Inner Space*, a Disneyland ride

Section 3.1 – How the structure of Al atoms determines the density of aluminum metal

The densities of elements and the radii of their atoms are examples of *periodic properties*. A **periodic property** is one that is generally predictable based on an element’s position within the periodic table. In this chapter, we examine several periodic properties of elements, including atomic radius, ionization energy, and electron affinity. As we do, we will see that these properties—as well as the overall arrangement of the periodic table—are explained by quantum-mechanical theory, which we first examined in Chapter 2. *Quantum-mechanical theory explains the electronic structure of atoms—this in turn determines the properties of those atoms.*

Section 3.5 – How atomic structure determines the properties of the elements

3.5 Electron Configurations and Elemental Properties

As we discussed in Section 3.4, *the chemical properties of elements are largely determined by the number of valence electrons the elements contain*. The properties of elements are periodic because the number of valence electrons is periodic. Mendeleev grouped elements into families (or columns) based on observations about their properties. We now know that elements in a family have the same number of valence electrons. In other words, elements in a family have similar properties because they have the same number of valence electrons.

Section 14.2 – How reaction rates depend of the structure of the reacting particles

14.2 Rates of Reaction and the Particulate Nature of Matter

We have seen throughout this book that matter is composed of particles (atoms, ions, and molecules). The simplest way to begin to understand the factors that influence a reaction rate is to think of a chemical reaction as the result of a collision between these particles. This is the basis of *the collision model*, which we cover in more detail in Section 14.6. For example, consider the following simple generic reaction occurring in the gaseous state:



According to the collision model, the reaction occurs as a result of a collision between A-A particles and B particles.



CHAPTER

3

Periodic Properties of the Elements

GREAT ADVANCES IN SCIENCE occur not only when a scientist sees something new, but also when a scientist sees something everyone else has seen in a new way. That is what happened in 1869 when Dmitri Mendeleev, a Russian chemistry professor, saw a pattern in the properties of elements. Mendeleev’s insight led to the development of the periodic table. Recall from Chapter 1 that theories explain the underlying reasons for observations. If we think of Mendeleev’s periodic table as a compact way to summarize a large number of observations, then quantum mechanics is the theory that explains the underlying reasons. Quantum mechanics explains how electrons are arranged in an element’s atoms, which in turn determines the element’s properties. Because the periodic table is organized according to those properties, quantum mechanics elegantly accounts for Mendeleev’s periodic table. In this chapter, we see a continuation of this book’s theme—the properties of matter (in this case, the elements in the periodic table) are explained by the properties of the particles that compose them (in this case, atoms and their electrons).

“It is the function of science to discover the existence of a general reign of order in nature and to find the causes governing this order.”

—Dmitri Mendeleev (1834–1907)

3.1 Aluminum: Low-Density Atoms Result in Low-Density Metal

Look out the window of almost any airplane and you will see the large sheets of aluminum that compose the aircraft’s wing. In fact, the majority of the plane is most likely made out of aluminum. Aluminum has several properties that make it suitable for airplane construction, but among the most important is its low density. Aluminum has a density of only 2.70 g/cm³. For comparison, iron’s density is 7.86 g/cm³, and platinum’s density is 21.4 g/cm³. Why is the density of aluminum metal so low?

The density of aluminum metal is low because the density of an aluminum atom is low. Few metal atoms have a lower mass-to-volume ratio than aluminum, and those that do can’t be used in airplanes for other reasons (such as their high chemical reactivity). Although the arrangements of atoms in a solid must also be considered when evaluating the density of the solid, the mass-to-volume ratio of the composite atoms

Section 16.4 – How the structure of an acid determines its strength

16.4 Acid Strength and Molecular Structure

We have learned that a Brønsted–Lowry acid is a proton [H⁺] donor. Now we explore why some hydrogen-containing molecules act as proton donors while others do not. In other words, we explore *how the structure of a molecule affects its acidity*. Why is H₂S acidic while CH₄ is not? Or why is HF a weak acid while HCl is a strong acid? We divide our discussion about these issues into two categories: binary acids (those containing hydrogen and only one other element) and oxyacids (those containing hydrogen bonded to an oxygen atom that is bonded to another element).

Section 18.4 – How the structure of a molecule determines its entropy

18.7 Entropy Changes in Chemical Reactions: Calculating $\Delta S^\circ_{\text{rxn}}$

We now turn our attention to predicting and quantifying entropy and entropy changes in a sample of matter. As we examine this topic, we again encounter the theme of this text: *Structure determines properties*. In this case, the property we are interested in is entropy. In this section we see how the structure of the particles that compose a particular sample of matter determines the entropy that the sample possesses at a given temperature and pressure.

Build students' 21st-century skills to set them up for success.

Data Interpretation and Analysis Exercise 3.141

Figure 1 (Figure 3) plots the first ionization energies of the elements in period 3. The table below lists some of the binary compounds that form between fluorine and the elements in period 3.

Element	Na	Mg	Al	Si	P	S	Cl	Ar
Compound	NaF	MgF ₂	AlF ₃	PF ₃	SF ₂	ClF		

Figure 2 (Figure 3) plots the electron affinities of the elements in period 3.

Use the information provided to answer the following questions. The plot shows first ionization values for all elements in period 3.

Figure 1

Part A

Describe the general trend in period 3 first ionization energies as you move from left to right across the periodic table. Explain why this trend occurs.

Match the words in the left column to the appropriate blanks in the sentences on the right. Make certain each sentence is complete before submitting your answer.

the concept of shielding

increases

periodic law

more

decreases

the concept of penetration

atomic mass

atomic number

less

Coulomb's law

1. Moving from left to right across period 3, electrons populate the same shell (3s and 3p subshells), and the increase in _____ signifies that the force of attraction will increase according to _____ because the distance between the nucleus and outermost electrons _____.

2. Therefore, ejecting the outermost electrons requires _____ energy as you move right across the periodic table.

Submit Hint My Answers Give Up Review Part

Data Interpretation and Analysis Questions at the end of each chapter allow students to use real data to develop 21st-century problem-solving skills. These in-depth exercises give students practice reading graphs, digesting tables, and making data-driven decisions. Find these questions at the end of every chapter as well as in the item library of MasteringChemistry™.

Questions for Group Work

allow students to collaborate and apply problem-solving skills on questions covering multiple concepts. The questions can be used in or out of the classroom, and the goal is to foster collaborative learning and encourage students to work together as a team to solve problems. All questions for group work are pre-loaded into Learning Catalytics™ for ease of assignment.

DATA INTERPRETATION AND ANALYSIS

108. In April 2014, in an effort to save money, officials in Flint, Michigan, changed their water source from Lake Huron to the Flint River. In subsequent months, residents began complaining about the quality of the water, and General Motors (which has an engine plant in Flint) stopped using the water in manufacturing because of its corrosiveness. That corrosiveness was causing problems that would soon fuel a national outrage. The water flowed through pipes to taps in homes, and as it flowed through the pipes, many of which contained lead, the corrosive water became contaminated with lead. Routine monitoring of the tap water in select homes did not reveal the magnitude of the problem because samples were collected only after preflushing the tap (allowing the water to run for a time).
- A Virginia Tech professor and his students began an independent test of the water coming from Flint's taps and got much different results by analyzing the water that initially came from the taps (first draw). Their results—which showed elevated lead levels in the tap water—ultimately forced officials to switch back to the Lake Huron water source.
- The following table shows a set of data collected by the Virginia Tech team. The lead levels in water are expressed in units of parts per billion (ppb). 1 ppb = 1 g Pb/10⁹ parts solution. Examine the data and answer the questions that follow.

Lead Levels in Samples of Flint Tap Water

Sample #	Lead Level 1 st draw (ppb)	Lead Level 45 sec flush (ppb)	Lead Level 2 min flush (ppb)
1	0.344	0.226	0.145
2	8.133	10.77	2.761
3	1.111	0.11	0.123
4	8.007	7.446	3.384
5	1.951	0.048	0.035
6	7.2	1.4	0.2
7	40.63	9.726	6.132
8	1.1	2.5	0.1
9	10.6	1.038	1.294
10	6.2	4.2	2.3
11	4.358	0.822	0.147
12	24.37	8.796	4.347
13	6.609	5.752	1.433
14	4.062	1.099	1.085
15	29.59	3.258	1.843

Source: FlintWaterStudy.org (2015) "Lead Results from Tap Water Sampling in Flint, Michigan, during the Flint Water Crisis"

QUESTIONS FOR GROUP WORK

Discuss these questions with the group and record your consensus answer.

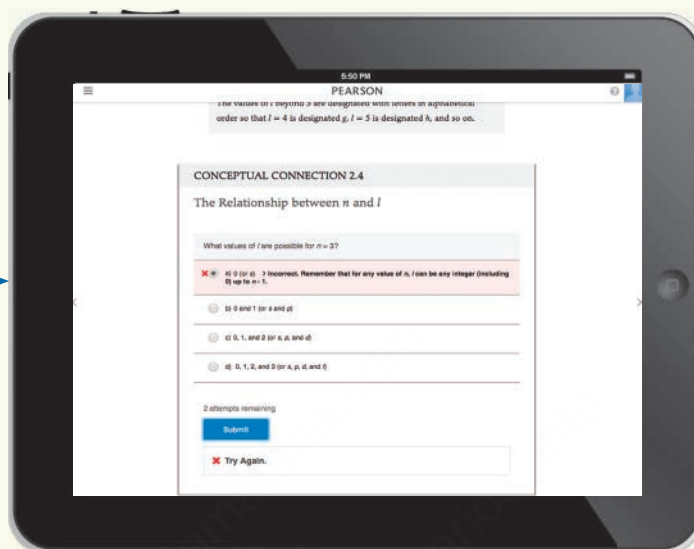
136. In a complete sentence, describe the relationship between shielding and penetration.
137. Play a game to memorize the order in which orbitals fill. Have each group member in turn state the name of the next orbital to fill and the maximum number of electrons it can hold (for example, "1s two," "2s two," "2p six"). If a member gets stuck, other group members can help, consulting Figure 3.8 and the accompanying text summary if necessary. However, when a member gets stuck, the next player starts back at "1s two." Keep going until each group member can list all the orbitals in order up to "6s two."


Active Classroom Learning

138. Sketch a periodic table (without element symbols). Include the correct number of rows and columns in the s, p, d, and f blocks. Shade in the squares for elements that have irregular electron configurations.
139. In complete sentences, explain: a) why Se²⁻ and Br⁻ are about the same size; b) why Br⁻ is slightly smaller than Se²⁻; and c) which singly charged cation you would expect to be approximately the same size as Se²⁻ and Br⁻ and why.
140. Have each member of your group sketch a periodic table indicating a periodic trend (atomic size, first ionization energy, metallic character, etc.). Have each member present his or her table to the rest of the group and explain the trend based on concepts such as orbital size or effective nuclear charge.

Engage students in chemistry like never before with an interactive eText 2.0.

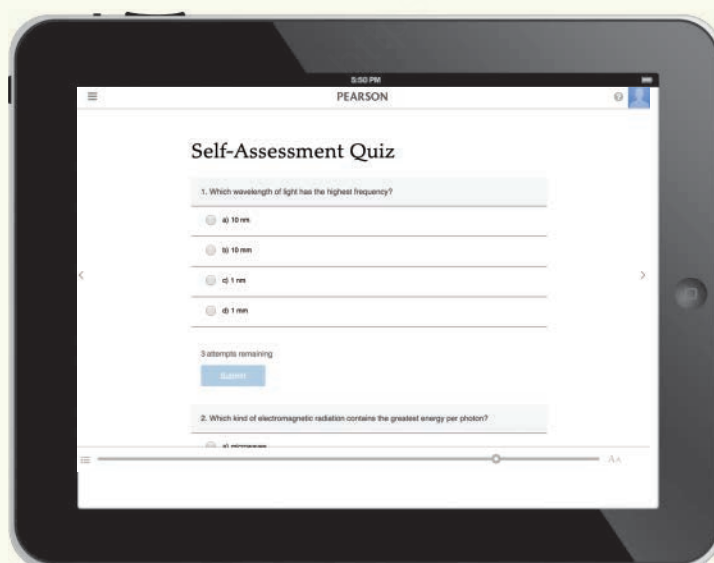
Conceptual Connection



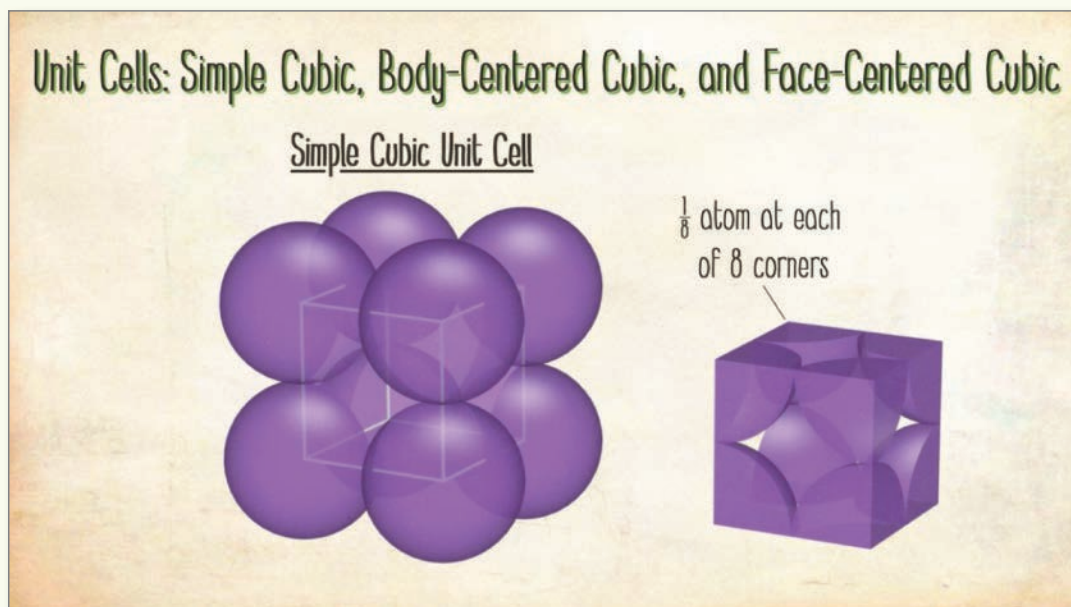
NEW INTERACTIVES! Conceptual Connections and Self-Assessment Quizzes are now embedded for students within eText 2.0! With one click on the  icon, these activities are brought to life, allowing students to study on their own and test their understanding in real-time.


Complete with answer-specific feedback, these interactives help students extinguish misconceptions and deepen their understanding of important concepts and topics. Quizzes are algorithmically coded into MasteringChemistry™ to allow students to practice the types of questions they will encounter on the ACS or other exams. All Conceptual Connections are also embedded and interactive in eText 2.0 and are assignable activities MasteringChemistry™.


Self-Assessment Quiz



Embedded Interactive videos create a dynamic learning experience in eText 2.0.



◀ **Key Concept Videos** combine artwork from the textbook with 2D and 3D animations to create a dynamic on-screen viewing and learning experience. These short videos include narration and brief live-action clips of author Nivaldo Tro explaining the key concepts of each chapter of *Chemistry: Structure and Properties*. All Key Concept Videos are embedded and interactive in  and are assignable activities in MasteringChemistry™.

Interactive Worked Examples are digital versions of select worked examples from the text that make Tro's unique problem-solving strategies interactive. These instruct students how to break down problems using Tro's "Sort, Strategize, Solve, and Check" technique. These problems are incorporated into the reading experience and are available in MasteringChemistry™ as assignable activities. 

Density

Given: $T(^{\circ}\text{C}) = 125^{\circ}\text{C}$
 $P = 755 \text{ mmHg}$

Find: d

Conceptual Plan

$P, T, \mathcal{M} \rightarrow d$

$$d = \frac{P\mathcal{M}}{RT}$$

molar mass $\text{N}_2 = 28.02 \text{ g/mol}$

$T(\text{K}) = 125 + 273 = 398 \text{ K}$

$P = 755 \text{ mmHg} \times \frac{1 \text{ atm}}{760 \text{ mmHg}} = 0.99342 \text{ atm}$

$d = \frac{P\mathcal{M}}{RT} \quad R = 0.08206 \frac{\text{L} \cdot \text{atm}}{\text{mol} \cdot \text{K}}$

What is the density of the gas?

a) 0.852 g/L b) 648 g/L c) 2.71 g/L

Teaching Modules and Learning Catalytics™ in MasteringChemistry™ ensure student engagement before, during, and after class.



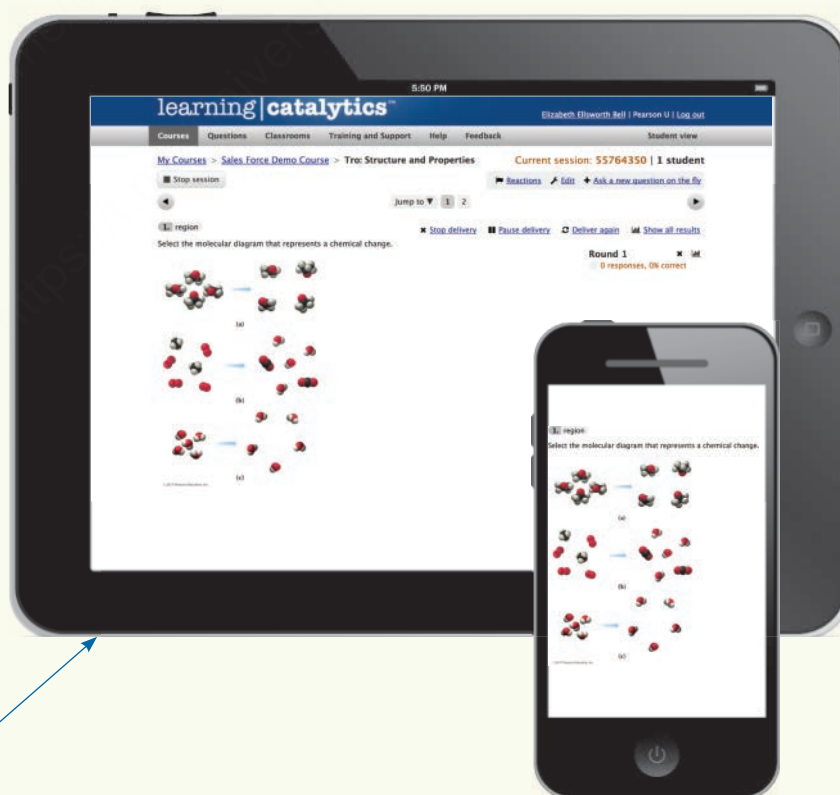
Ready-To-Go Teaching Modules provide instructors with easy-to-use tools for teaching the toughest topics in chemistry. These modules demonstrate how your colleagues effectively use all the resources Pearson has to offer to accompany *Chemistry: Structure and Properties*.

Ready-to-Go Teaching Modules were created for and by instructors to provide easy-to-use assignments for before, during, and after class. Assets include in-class activities and questions in Learning Catalytics™.

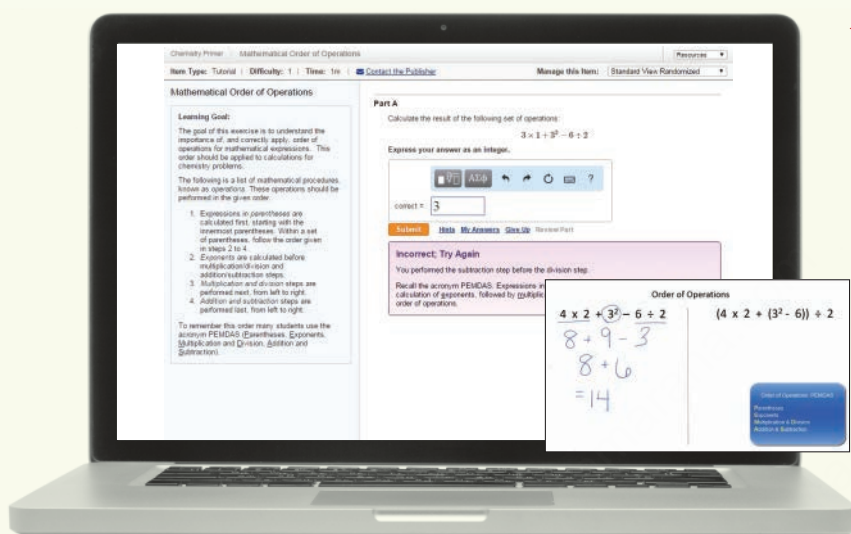
With questions specific to Tro's *Structure and Properties*, **Learning Catalytics™** generates class discussion, customizes your lecture, and promotes peer-to-peer learning with real-time analytics. MasteringChemistry™ with eText 2.0 now provides Learning Catalytics™—the interactive student response tool that uses students' smartphones, tablets, or laptops to engage them in more sophisticated tasks and individual and group problem-solving. Instructors can:

- NEW! Upload a full PowerPoint® deck for easy creation of slide questions.
- NEW! Team names are no longer case sensitive.
- Help students develop critical thinking skills.
- Monitor responses to find out where students are struggling.
- Rely on real-time data to adjust teaching strategy.
- Automatically group students for discussion, teamwork, and peer-to-peer learning.

Tro's Questions for Group Work can be found in Learning Catalytics™ so that students can work these questions in groups.



The Chemistry Primer and Dynamic Study modules encourage students to come to class prepared.



◀ **NEW! The Chemistry Primer** helps students remediate their chemistry math skills and prepare for their first college chemistry course.

- Pre-built Assignments get students up-to-speed at the beginning of the course.
- Math is covered in the context of chemistry, basic chemical literacy, balancing chemical equations, mole theory, and stoichiometry.
- Scaled to students' needs, remediation is only suggested to students that perform poorly on initial assessment.
- Remediation includes tutorials, wrong-answer specific feedback, video instruction, and step-wise scaffolding to build students' abilities.

▶ **66 Dynamic Study Modules** help students study effectively on their own by continuously assessing their activity and performance in real time. Here's how it works: students complete a set of questions with a unique answer format that also asks them to indicate their confidence level. Questions repeat until the student can answer them all correctly and confidently. Study modules are available as graded assignments prior to class and are accessible on smartphones, tablets, and computers.

Topics include:

- Key math skills
- General chemistry concepts such as phases of matter, redox reactions, and acids and bases
- Nuclear chemistry
- Organic and biochemistry



Instructor and student supplements

Solutions Manual	0134460693 / 9780134460697 The solution manual contains complete, step-by-step solutions to end-of-chapter problems.
Student's Selected Solutions Manual	0134460677 / 9780134460673 The selected solution manual for students contains complete, step-by-step solutions to selected odd-numbered end-of-chapter problems.
Instructor Resource Manual (Download only)	0134549422 / 9780134549422 For download only, the <i>Instructor Resource Manual</i> is intended as a resource for both new and experienced teachers. It includes learning objectives, chapter reviews, and answers to the texts' questions. The <i>Instructor Resource Manual</i> also includes discussion topics and advice about how to integrate visual supplements (including the on-line resources), questions and various other ideas for the classroom.
Instructor Resource Materials (Download only)	0134460723 / 9780134460727 The material available for download includes: <ul style="list-style-type: none">• All illustrations, tables, and photos from the text in JPEG format• Four pre-built PowerPoint® Presentations (lecture, worked examples, images, CRS/clicker questions)• Interactive animations, movies, and 3D molecules• TestGen computerized software with the TestGen version of the Testbank• Word.doc files of the Test Item File
Laboratory Manual	0134616456 / 9780134616452 Prepared by Daphne Norton of the University of Georgia. This manual contains over twenty experiments designed to complement an atoms first approach. You can also customize these labs through Pearson Custom Library. For more information, visit http://www.pearsoncustom.com/custom-library .
Study Guide	0134460685 / 9780134460680 This <i>Study Guide</i> was written specifically to assist students using <i>Structure and Properties</i> . It presents the major concepts, theories, and applications discussed in the text in a comprehensive and accessible manner for students. It contains learning objectives, chapter summaries and outlines, as well as examples, self tests and concept questions.
MasteringChemistry™ with Pearson eText 2.0—Instant Access	0134565096 / 9780134565095 This product includes all of the resources of MasteringChemistry™ plus the now fully mobile eText 2.0. eText 2.0 mobile app offers offline access and can be downloaded for most iOS and Android phones/tablets from the Apple App Store or Google Play. Added integration brings videos and other rich media to the student's reading experience. MasteringChemistry™ from Pearson is the leading online homework, tutorial, and assessment system, designed to improve results by engaging students with powerful content. Instructors ensure students arrive ready to learn by assigning educationally effective content and encourage critical thinking and retention with in-class resources such as Learning Catalytics™. Ready-to-Go Teaching Modules created for and by instructors provide a guide for easy-to-use assignments for before and after class plus in-class activities and questions in Learning Catalytics™. Students can further master concepts through traditional and adaptive homework assignments that provide hints and answer-specific feedback. The Mastering™ gradebook records scores for all automatically-graded assignments in one place, while diagnostic tools give instructors access to rich data to assess student understanding and misconceptions. URL: http://www.masteringchemistry.com
Modified MasteringChemistry™ with Pearson eText 2.0—Instant Access	0134554485 / 9780134554488 URL: http://pearsonmastering.com

Tro | Chemistry: Structure and Properties

E.1 The Metric Mix-up: A \$125 Million Unit Error 3

E.2 The Units of Measurement 4

E.3 The Reliability of a Measurement 8

E.4 Significant Figures in Calculations 10

E.5 Density 14

E.6 Energy and Its Units 15

E.7 Converting between Units 18

E.8 Problem-Solving Strategies 20

E.9 Solving Problems Involving Equations 24

Key Learning Outcomes 27



The \$125 million Mars Climate Orbiter was lost in the Martian atmosphere in 1999 because of a unit mix-up.

CHAPTER

E

Essentials: Units, Measurement, and Problem Solving

QUANTIFICATION IS THE ASSIGNMENT of a number to some property of a substance or thing. For example, when we say that a pencil is 16 cm long, we assign a number to its length—we *quantify* how long it is. Quantification is among the most powerful tools in science. It requires the use of units, agreed-upon quantities by which properties are quantified. We used the unit *centimeter* in quantifying the length of the pencil. People all over the world agree about the length of a centimeter; therefore, we can use that standard to specify the length of any object. In this chapter, we look closely at quantification and problem solving. Science would be much less powerful without these tools.

“The eternal mystery of the world is its comprehensibility.”

—Albert Einstein (1879–1955)

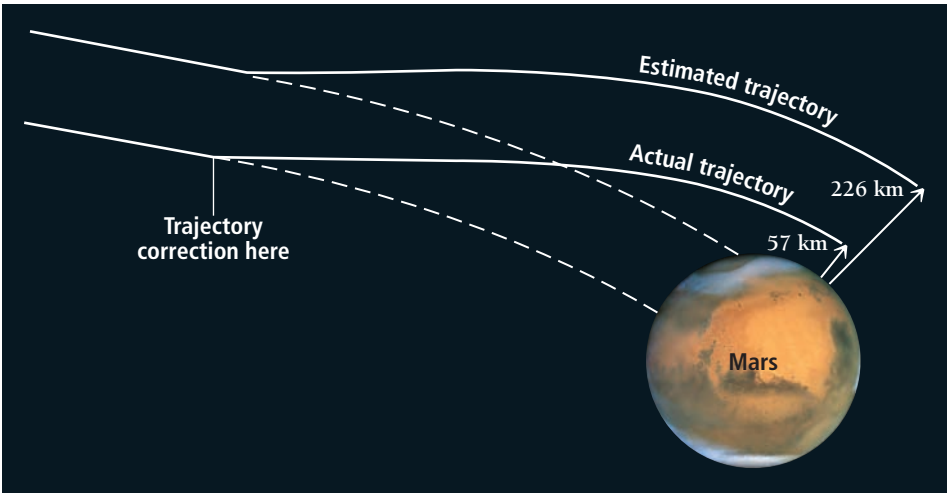
E.1 The Metric Mix-up: A \$125 Million Unit Error

On December 11, 1998, NASA launched the Mars Climate Orbiter, which was to become the first weather satellite for a planet other than Earth. The Orbiter’s mission was to monitor the Martian atmosphere and to serve as a communications relay for the Mars Polar Lander, a probe that was to follow the Orbiter and land on the planet’s surface three weeks later. Unfortunately, the mission ended in disaster. A unit mix-up caused the Orbiter to enter the Martian atmosphere at an altitude that was too low. Instead of settling into a stable orbit, the Orbiter likely disintegrated. The cost of the failed mission was estimated at \$125 million.

There were hints of trouble several times during the Orbiter’s nine-month cruise from Earth to Mars. Several adjustments made to its trajectory seemed to alter the course of the Orbiter less than expected. As the Orbiter neared the planet on September 8, 1999, discrepancies emerged about its trajectory. Some of the data indicated that the satellite was approaching Mars on a path that would place it too low in the Martian atmosphere. On September 15, engineers made the final adjustments that were supposed to put the Orbiter 226 km above the planet’s surface. About a week later, as the Orbiter entered the atmosphere, communications were lost. The Orbiter had disappeared.

Later investigations showed that the Orbiter had come within 57 km of the planet surface (**Figure E.1** ► on the next page), an altitude that was too low. If a spacecraft enters a planet’s atmosphere too close to the planet’s surface, friction can cause the spacecraft to burn up. The on-board computers that

► **FIGURE E.1 The Metric Mix-up**
The top trajectory represents the expected Mars Climate Orbiter trajectory; the bottom trajectory represents the actual one.



controlled the trajectory corrections were programmed in metric units (newton · second), but the ground engineers entered the trajectory corrections in English units (pound · second). The English and the metric units are not equivalent (1 pound · second = 4.45 newton · second). The corrections that the ground engineers entered were 4.45 times too small and did not alter the trajectory enough to keep the Orbiter at a sufficiently high altitude. In chemistry as in space exploration, **units** are critical. If we get them wrong, the consequences can be disastrous.

E.2 The Units of Measurement

The two most common unit systems are the **metric system**, used in most of the world, and the **English system**, used in the United States. Scientists use the **International System of Units (SI)**, which is based on the metric system.

The Standard Units

Table E.1 shows the standard SI base units. For now, we focus on the first four of these units: the *meter*, the standard unit of length; the *kilogram*, the standard unit of mass; the *second*, the standard unit of time; and the *kelvin*, the standard unit of temperature.

TABLE E.1 SI Base Units

Quantity	Unit	Symbol
Length	Meter	m
Mass	Kilogram	kg
Time	Second	s
Temperature	Kelvin	K
Amount of substance	Mole	mol
Electric current	Ampere	A
Luminous intensity	Candela	cd

The Meter: A Measure of Length

A **meter (m)** is slightly longer than a yard (1 yard is 36 inches while 1 meter is 39.37 inches). Thus, a 100-yard football field measures only 91.4 meters. The meter was originally defined as 1/10,000,000 of the distance from the equator to the North Pole (through Paris). The International Bureau of Weights and Measures now defines it more precisely as the distance light travels through a vacuum in a designated period of time, 1/299,792,458 second. Scientists commonly deal with a wide range of lengths and distances. The separation between the sun and the closest star (Proxima Centauri) is about 3.8×10^{16} m, while many chemical bonds measure about 1.5×10^{-10} m.

The abbreviation *SI* comes from the French, *Système International d'Unités*.

The velocity of light in a vacuum is 3.00×10^8 m/s.

Scientific notation is reviewed in Appendix IA.

The Kilogram: A Measure of Mass

The **kilogram (kg)**, defined as the mass of a metal cylinder kept at the International Bureau of Weights and Measures at Sèvres, France, is a measure of *mass*, a quantity different from *weight*. The **mass** of an object is a measure of the quantity of matter within it, while the *weight* of an object is a measure of the *gravitational pull* on its matter. If you could weigh yourself on the moon, for example, its weaker gravity would pull on you with less force than does Earth's gravity, resulting in a lower weight. A 130-pound (lb) person on Earth would weigh only 21.5 lb on the moon. However, the person's mass—the quantity of matter in his or her body—remains the same on every planet. One kilogram of mass is the equivalent of 2.205 lb of weight on Earth, so if we express mass in kilograms, a 130-lb person has a mass of approximately 59 kg and this book has a mass of about 2.5 kg. Another common unit of mass is the gram (g). One gram is $1/1000$ kg. A nickel (5¢) has a mass of about 5 g.

The Second: A Measure of Time

If you live in the United States, the **second (s)** is perhaps the most familiar SI unit. The International Bureau of Weights and Measures originally defined the second in terms of the day and the year, but a second is now defined more precisely as the duration of 9,192,631,770 periods of the radiation emitted from a certain transition in a cesium-133 atom. (We discuss transitions and the emission of radiation by atoms in Chapter 2.) Scientists measure time on a large range of scales. The human heart beats about once every second; the age of the universe is estimated to be about 4.32×10^{17} s (13.7 billion years); and some molecular bonds break or form in time periods as short as 1×10^{-15} s.

The Kelvin: A Measure of Temperature

The **kelvin (K)** is the SI unit of **temperature**. The temperature of a sample of matter is a measure of the amount of average kinetic energy—the energy due to motion—of the atoms or molecules that compose the matter. The molecules in a *hot* glass of water are, on average, moving faster than the molecules in a *cold* glass of water. Temperature is a measure of this molecular motion.

Temperature also determines the direction of thermal energy transfer, or what we commonly call *heat*. Thermal energy transfers from hot objects to cold ones. For example, when you touch another person's warm hand (and yours is cold), thermal energy flows *from that person's hand to yours*, making your hand feel warmer. However, if you touch an ice cube, thermal energy flows *out of your hand* to the ice, cooling your hand (and possibly melting some of the ice cube).

Figure E.2 ► shows the three temperature scales. The most common in the United States is the **Fahrenheit scale (°F)**, shown on the left. On the Fahrenheit scale, water freezes at 32 °F and boils at 212 °F at sea level. Room temperature is approximately 72 °F. The Fahrenheit scale was originally determined by assigning 0 °F to the freezing point of a concentrated saltwater solution and 96 °F to normal body temperature. Normal body temperature was later measured more accurately to be 98.6 °F.

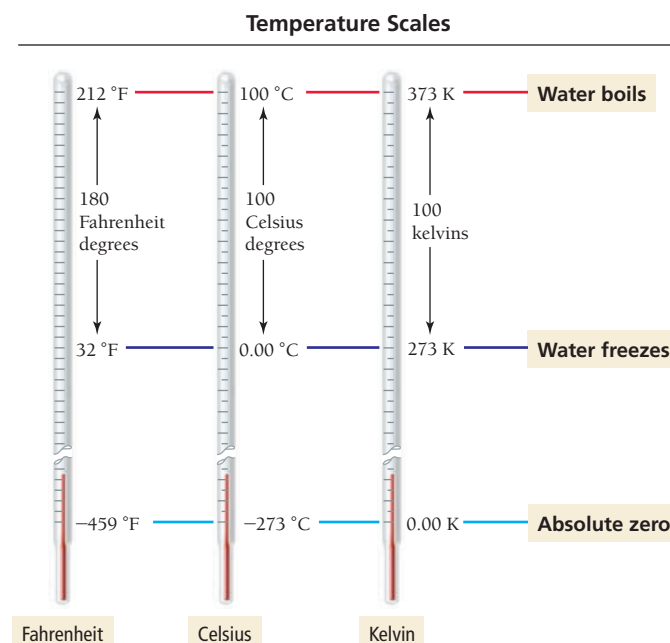
Scientists and citizens of most countries other than the United States typically use the **Celsius (°C) scale**, shown in the middle of Figure E.2. On this scale, pure water freezes at 0 °C and boils at 100 °C (at sea level). Room temperature is approximately 22 °C. The Fahrenheit scale and the Celsius scale differ both in the size of their respective degrees and the temperature each designates as “zero.” Both the Fahrenheit and Celsius scales allow for negative temperatures.

The SI unit for temperature, as we have seen, is the kelvin, shown on the right in Figure E.2. The **Kelvin scale** (sometimes also called the *absolute scale*) avoids negative temperatures by assigning 0 K to the coldest temperature possible, absolute zero. Absolute zero (-273°C or -459°F) is the temperature at which molecular motion virtually stops. Lower temperatures do not exist. The size of the kelvin is



▲ A nickel (5 cents) weighs about 5 grams.

► **FIGURE E.2 Comparison of the Fahrenheit, Celsius, and Kelvin Temperature Scales** The Fahrenheit degree is five-ninths the size of the Celsius degree and the kelvin. The zero point of the Kelvin scale is absolute zero (the lowest possible temperature), whereas the zero point of the Celsius scale is the freezing point of water.



The Celsius Temperature Scale



0 °C – Water freezes



10 °C – Brisk fall day



22 °C – Room temperature



45 °C – Summer day in Death Valley

Note that we refer to Kelvin temperatures in kelvins (*not* “degrees Kelvin”) or K (*not* °K).

identical to that of the Celsius degree—the only difference is the temperature that each designates as zero. You can convert between the temperature scales with these formulas:

$$^{\circ}\text{C} = \frac{(^{\circ}\text{F} - 32)}{1.8}$$

$$\text{K} = ^{\circ}\text{C} + 273.15$$

EXAMPLE E.1

Converting between Temperature Scales

A sick child has a temperature of 40.00 °C. What is the child’s temperature in (a) K and (b) °F?

SOLUTION

- (a) Begin by finding the equation that relates the quantity that is given (°C) and the quantity you are trying to find (K).

Since this equation gives the temperature in K directly, substitute in the correct value for the temperature in °C and calculate the answer.

$$\begin{aligned} \text{K} &= ^{\circ}\text{C} + 273.15 \\ \text{K} &= ^{\circ}\text{C} + 273.15 \\ \text{K} &= 40.00 + 273.15 = 313.15 \text{ K} \end{aligned}$$

- (b) To convert from °C to °F, find the equation that relates these two quantities.

Since this equation expresses °C in terms of °F, solve the equation for °F.

Now substitute °C into the equation and calculate the answer.
Note: The number of digits reported in this answer follows significant figure conventions, covered later in this section.

$$\begin{aligned} ^{\circ}\text{C} &= \frac{(^{\circ}\text{F} - 32)}{1.8} \\ ^{\circ}\text{C} &= \frac{(^{\circ}\text{F} - 32)}{1.8} \\ 1.8(^{\circ}\text{C}) &= (^{\circ}\text{F} - 32) \\ ^{\circ}\text{F} &= 1.8(^{\circ}\text{C}) + 32 \\ ^{\circ}\text{F} &= 1.8(^{\circ}\text{C}) + 32 \\ ^{\circ}\text{F} &= 1.8(40.00^{\circ}\text{C}) + 32 = 104.00^{\circ}\text{F} \end{aligned}$$

FOR PRACTICE E.1

Gallium is a solid metal at room temperature but will melt to a liquid in your hand. The melting point of gallium is 85.6 °F. What is this temperature on (a) the Celsius scale and (b) the Kelvin scale?

Answers to For Practice and For More Practice problems are in Appendix IV.

Prefix Multipliers

Scientific notation (see Appendix 1A) allows us to express very large or very small quantities in a compact manner by using exponents. For example, we write the diameter of a hydrogen atom as 1.06×10^{-10} m. The International System of Units uses the **prefix multipliers** shown in Table E.2 with the standard units.

These multipliers change the value of the unit by powers of 10 (just like an exponent does in scientific notation). For example, the kilometer has the prefix “kilo” meaning 1000 or 10^3 . Therefore,

1 kilometer = 1000 meters = 10^3 meters

TABLE E.2 SI Prefix Multipliers

Prefix	Symbol	Multiplier	
exa	E	1,000,000,000,000,000,000	(10^{18})
peta	P	1,000,000,000,000,000	(10^{15})
tera	T	1,000,000,000,000	(10^{12})
giga	G	1,000,000,000	(10^9)
mega	M	1,000,000	(10^6)
kilo	k	1000	(10^3)
deci	d	0.1	(10^{-1})
centi	c	0.01	(10^{-2})
milli	m	0.001	(10^{-3})
micro	μ	0.000001	(10^{-6})
nano	n	0.000000001	(10^{-9})
pico	p	0.000000000001	(10^{-12})
femto	f	0.000000000000001	(10^{-15})
atto	a	0.000000000000000001	(10^{-18})

Similarly, the millimeter has the prefix “milli,” meaning 0.001 or 10^{-3} .

1 millimeter = 0.001 meters = 10^{-3} meters

When we report a measurement, we choose a prefix multiplier close to the size of the quantity we are measuring. For example, to state the diameter of a hydrogen atom, which is 1.06×10^{-10} m, we use picometers (106 pm) or nanometers (0.106 nm) rather than micrometers or millimeters. We choose the prefix multiplier that is most convenient for a particular number.

The eText 2.0 icon indicates that this feature is embedded and interactive in the eText.

Prefix Multipliers

What prefix multiplier is appropriate for reporting a measurement of 5.57×10^{-5} m?
Note: Answers to Conceptual Connections can be found at the end of each chapter.

E.1



Conceptual Connection

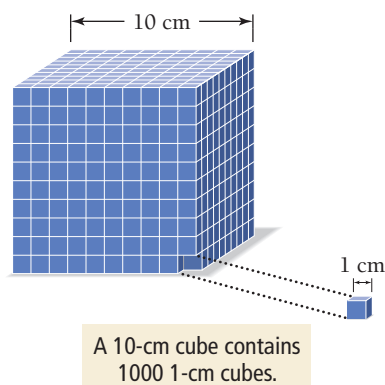


Units of Volume

Many scientific measurements require combinations of units. For example, velocities are often reported in units such as km/s, and densities are often reported in units of g/cm³. Both of these units are **derived units**, combinations of other units. An important SI-derived unit for chemistry is the m³, used to report measurements of volume.

Volume is a measure of space. Any unit of length, when cubed (raised to the third power), becomes a unit of volume. The cubic meter (m³), cubic centimeter (cm³), and cubic millimeter (mm³) are all

Relationship between Length and Volume



▲ **FIGURE E.3** The Relationship between Length and Volume

TABLE E.3 Common Units for Volume and Their Equivalents

1 liter (L) = 1000 mL = 1000 cm ³
1 liter (L) = 1.057 quarts (qt)
1 U.S. gallon (gal) = 3.785 liters (L)

units of volume. The cubic nature of volume is not always intuitive, and studies have shown that our brains are not naturally wired to think abstractly, which we need to do in order to think about volume. For example, consider this question: How many small cubes measuring 1 cm on each side are required to construct a large cube measuring 10 cm (or 1 dm) on a side?

The answer to this question, as we can see by carefully examining the unit cube in **Figure E.3** ◀, is 1000 small cubes. When we go from a linear, one-dimensional distance to a three-dimensional volume, we must raise both the linear dimension *and* its unit to the third power (not just multiply by 3). The volume of a cube is equal to the length of its edge cubed:

$$\text{volume of cube} = (\text{edge length})^3$$

A cube with a 10-cm edge length has a volume of (10 cm)³ or 1000 cm³, and a cube with a 100-cm edge length has a volume of (100 cm)³ = 1,000,000 cm³. Other common units of volume in chemistry are the **liter (L)** and the **milliliter (mL)**. One milliliter (10⁻³ L) is equal to 1 cm³. A gallon of gasoline contains 3.785 L. Table E.3 lists some common units for volume and their equivalents.

E.3 The Reliability of a Measurement

The reliability of a measurement depends on the instrument used to make the measurement. For example, a bathroom scale can reliably differentiate between 65 lb and 75 lb but probably can't differentiate between 1.65 and 1.75 lb. A more precise scale, such as the one a butcher uses to weigh meat, can differentiate between 1.65 and 1.75 lb. The butcher shop scale is more precise than the bathroom scale. We must consider the reliability of measurements when reporting and manipulating them.

Reporting Measurements to Reflect Certainty

Scientists normally report measured quantities so that the number of reported digits reflects the certainty in the measurement: more digits, more certainty; fewer digits, less certainty.

For example, cosmologists report the age of the universe as 13.7 billion years. Measured values like this are usually written so that the uncertainty is in the last reported digit. (We assume the uncertainty to be ± 1 in the last digit unless otherwise indicated.) By reporting the age of the universe as 13.7 billion years, cosmologists mean that the uncertainty in the measurement is ± 0.1 billion years (or ± 100 million years). If the measurement was less certain, then the age would be reported differently. For example, reporting the age as 14 billion years would indicate that the uncertainty is ± 1 billion years. In general,

Scientific measurements are reported so that every digit is certain except the last, which is estimated.

Consider the following reported number:

5.213
↑ certain ↑ estimated

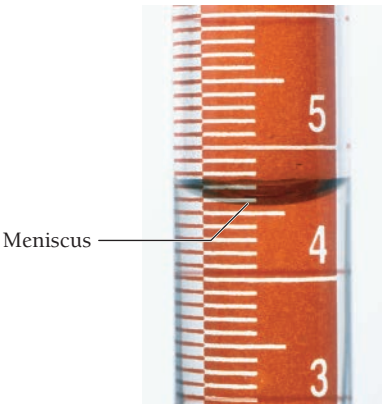
The first three digits are certain; the last digit is estimated.

The number of digits reported in a measurement depends on the measuring device. Consider weighing a sample on two different balances (**Figure E.4** ▶). These two balances have different levels of precision. The balance shown on top is accurate to the tenths place, so the uncertainty is ± 0.1 and the measurement should be reported as 10.5. The bottom balance is more precise, measuring to the ten-thousandths place, so the uncertainty is ± 0.0001 and the measurement should be reported as 10.4977 g. Many measuring instruments—such as laboratory glassware—are not digital. The measurement on these kinds of instruments must also be reported to reflect the instrument's precision. The usual procedure is to divide the space between the finest markings into ten and make that estimation the last digit reported. Example E.2 demonstrates this procedure.

EXAMPLE E.2

Reporting the Correct Number of Digits

The graduated cylinder shown here has markings every 0.1 mL. Report the volume (which is read at the bottom of the meniscus) to the correct number of digits. (Note: The meniscus is the crescent-shaped surface at the top of a column of liquid.)



SOLUTION

Since the bottom of the meniscus is between the 4.5 and 4.6 mL markings, mentally divide the space between the markings into 10 equal spaces and estimate the next digit. In this case, the result is 4.57 mL.

What if you estimated a little differently and wrote 4.56 mL? In general, a one-unit difference in the last digit is acceptable because the last digit is estimated and different people might estimate it slightly differently. However, if you wrote 4.63 mL, you would have misreported the measurement.

FOR PRACTICE E.2

Record the temperature on this thermometer to the correct number of digits.




Precision and Accuracy

Scientists often repeat measurements several times to increase their confidence in the result. We can distinguish between two different kinds of certainty—called accuracy and precision—associated with such measurements. **Accuracy** refers to how close the measured value is to the actual value. **Precision** refers to how close a series of measurements are to one another or how reproducible they are. A series of measurements can be precise (close to one another in value and reproducible) but not accurate (not close to the true value). Consider the results of three students who repeatedly weighed a lead block known to have a true mass of 10.00 g tabulated below and displayed in **Figure E.5** on the next page.

	Student A	Student B	Student C
Trial 1	10.49 g	9.78 g	10.03 g
Trial 2	9.79 g	9.82 g	9.99 g
Trial 3	9.92 g	9.75 g	10.03 g
Trial 4	10.31 g	9.80 g	9.98 g
Average	10.13 g	9.79 g	10.01 g

Estimation in Weighing



(a)

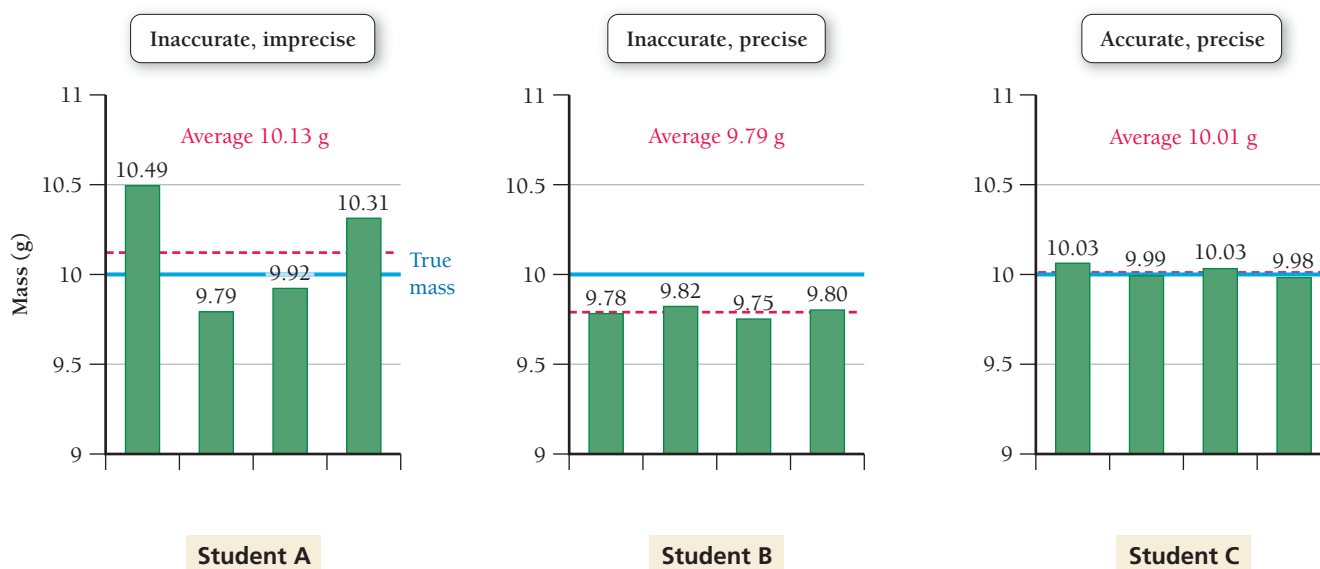
Report as 10.5 g



(b)

Report as 10.4977 g

▲ **FIGURE E.4 Precision in Weighing.** (a) This balance is precise to the tenths place. (b) This balance is precise to the ten-thousandths place.



▲ **FIGURE E.5 Precision and Accuracy** The results of three sets of measurements on the mass of a lead block. The blue horizontal line represents the true mass of the block (10.00 g). The red dashed line represents the average mass for each data set.

Measurements are precise if they are consistent with one another, but they are accurate only if they are close to the actual value:

- Student A's results are both inaccurate (not close to the true value) and imprecise (not consistent with one another). The inconsistency is the result of **random error**—error that has equal probability of being too high or too low. Almost all measurements have some degree of random error. Random error can, with enough trials, average itself out.
- Student B's results are precise (close to one another in value) but inaccurate. The inaccuracy is the result of **systematic error**—error that tends toward being either too high or too low. In contrast to random error, systematic error does not average out with repeated trials. For instance, if a balance is not properly calibrated, it may systematically read too high or too low.
- Student C's results display little systematic error or random error—they are both accurate and precise.

E.4 Significant Figures in Calculations

The precision of a measurement must be preserved, not only when recording the measurement, but also when performing calculations that use the measurement. We preserve this precision by using *significant figures*.

Counting Significant Figures

In any reported measurement, the non-place-holding digits—those that are not simply marking the decimal place—are called **significant figures** (or **significant digits**). For example, the number 23.5 has three significant figures while the number 23.56 has four. *The greater the number of significant figures, the greater the certainty of the measurement.*

To determine the number of significant figures in a number containing zeroes, we distinguish between zeroes that are significant and those that simply mark the decimal place. For example, in the number 0.0008, the leading zeroes (zeroes to the left of the first nonzero digit) mark the decimal place but *do not* add to the certainty of the measurement and are therefore not significant; this number has only one significant figure. In contrast, the trailing zeroes (zeroes at the end of a number) in the number 0.000800 *do add* to the certainty of the measurement and are therefore counted as significant; this number has three significant figures.

To determine the number of significant figures in a number, follow these rules. (See examples on the right.)

Significant Figure Rules

1. All nonzero digits are significant.
2. Interior zeroes (zeroes between two nonzero digits) are significant.
3. Leading zeroes (zeroes to the left of the first nonzero digit) are not significant. They only serve to locate the decimal point.
4. Trailing zeroes (zeroes at the end of a number) are categorized as follows:
 - Trailing zeroes after a decimal point are always significant.
 - Trailing zeroes before a decimal point (and after a nonzero number) are always significant.
 - Trailing zeroes before an implied decimal point are ambiguous and should be avoided by using scientific notation.
 - Some textbooks put a decimal point after one or more trailing zeroes if the zeroes are to be considered significant. We avoid that practice in this book, but you should be aware of it.

Examples

28.03

408

0.0032

45.000

140.00

1200

1.2×10^3

1.20×10^3

1.200×10^3

1200.

0.0540

7.0301

0.00006

3.5600

2500.55

ambiguous

2 significant figures

3 significant figures

4 significant figures

4 significant figures

(common in some textbooks)

Exact Numbers

Exact numbers have no uncertainty and thus do not limit the number of significant figures in any calculation. We regard an exact number as having an unlimited number of significant figures. Exact numbers originate from three sources:

- From the accurate counting of discrete objects. For example, 14 pencils means 14.0000 . . . pencils and 3 atoms means 3.00000 . . . atoms.
- From defined quantities, such as the number of centimeters in 1 m. Because 100 cm is defined as 1 m, 100 cm = 1 m means 100.00000 . . . cm = 1.0000000 . . . m
- From integral numbers that are part of an equation. For example, in the equation, $radius = \frac{diameter}{2}$, the number 2 is exact and therefore has an unlimited number of significant figures.

The eText 2.0 icon indicates that this feature is embedded and interactive in the eText.

EXAMPLE E.3

Determining the Number of Significant Figures in a Number

How many significant figures are in each number?

(a) 0.04450 m (b) 5.0003 km (c) 10 dm = 1 m (d) 1.000×10^5 s (e) 0.00002 mm (f) 10,000 m

SOLUTION

(a) 0.04450 m	Four significant figures. The two 4s and the 5 are significant (Rule 1). The trailing zero is after a decimal point and is therefore significant (Rule 4). The leading zeroes only mark the decimal place and are therefore not significant (Rule 3).
(b) 5.0003 km	Five significant figures. The 5 and 3 are significant (Rule 1), as are the three interior zeroes (Rule 2).
(c) 10 dm = 1 m	Unlimited significant figures. Defined quantities have an unlimited number of significant figures.
(d) 1.000×10^5 s	Four significant figures. The 1 is significant (Rule 1). The trailing zeroes are after a decimal point and therefore significant (Rule 4).
(e) 0.00002 mm	One significant figure. The 2 is significant (Rule 1). The leading zeroes only mark the decimal place and are therefore not significant (Rule 3).

Interactive
Worked Example
Video E.3

PEARSON
eText
2.0

—Continued on the next page

Continued from the previous page—

(f) 10,000 m	Ambiguous. The 1 is significant (Rule 1), but the trailing zeroes occur before an implied decimal point and are therefore ambiguous (Rule 4). Without more information, you would assume one significant figure. It is better to write this as 1×10^5 to indicate one significant figure or as 1.0000×10^5 to indicate five (Rule 4).
FOR PRACTICE E.3 How many significant figures are in each number? (a) 554 km (b) 7 pennies (c) 1.01×10^5 m (d) 0.00099 s (e) 1.4500 km (f) 21,000 m	

Significant Figures in Calculations

When we use measured quantities in calculations, the results of the calculation must reflect the precision of the measured quantities. We should not lose or gain precision during mathematical operations. Follow these rules when carrying significant figures through calculations.

Rules for Calculations

- 1. In multiplication or division, the result carries the same number of significant figures as the factor with the fewest significant figures.
- 2. In addition or subtraction, the result carries the same number of decimal places as the quantity with the fewest decimal places.
- 3. When rounding to the correct number of significant figures, round down if the last (or leftmost) digit dropped is 4 or less; round up if the last (or leftmost) digit dropped is 5 or more.
- 4. To avoid rounding errors in multistep calculations, round only the final answer—do not round intermediate steps. If you write down intermediate answers, keep track of significant figures by underlining the least significant digit.

Examples

1.052
(4 sig. figures)

\times

12.054
(5 sig. figures)

\times

0.53
(2 sig. figures)

$=$

6.7208

$=$

6.7
(2 sig. figures)

2.0035
(5 sig. figures)

\div

3.20
(3 sig. figures)

$=$

0.626094

$=$

0.626
(3 sig. figures)

2.34

5

0.07

$+2.9975$

5.4125

$= 5.41$

5.9

-0.221

5.679

$= 5.7$

In addition and subtraction, it is helpful to draw a line next to the number with the fewest decimal places. This line determines the number of decimal places in the answer.

To two significant figures:

- 5.37 rounds to 5.4
- 5.34 rounds to 5.3
- 5.35 rounds to 5.4
- 5.349 rounds to 5.3

Notice in the last example that only the last (or leftmost) digit being dropped determines in which direction to round—ignore all digits to the right of it.

A few books recommend a slightly different rounding procedure for cases where the last digit is 5. However, the procedure presented here is consistent with electronic calculators, and we use it throughout this book.

$6.78 \times 5.903 \times (5.489 - 5.01)$
 $= 6.78 \times 5.903 \times 0.479$
 $= 19.1707$
 $= 19$

underline least significant digit

\nearrow

Notice that for multiplication or division, the quantity with the fewest significant figures determines the number of significant figures in the answer, but for addition and subtraction, the quantity with the fewest decimal places determines the number of decimal places in the answer. In multiplication and division, we focus on significant figures, but in addition and subtraction we focus on decimal places. When a problem involves addition or subtraction, the answer may have a different number of significant figures than the

initial quantities. Keep this in mind in problems that involve both addition or subtraction and multiplication or division. For example,

$$\begin{aligned} \frac{1.002 - 0.999}{3.754} &= \frac{0.003}{3.754} \\ &= 7.99 \times 10^{-4} \\ &= 8 \times 10^{-4} \end{aligned}$$

The answer has only one significant figure, even though the initial numbers had three or four significant figures.

EXAMPLE E.4

Significant Figures in Calculations

Interactive
Worked Example
Video E.4



Perform each calculation to the correct number of significant figures.

- (a) $1.10 \times 0.5120 \times 4.0015 \div 3.4555$
- (b)
$$\begin{array}{r} 0.355 \\ +105.1 \\ -100.5820 \end{array}$$
- (c) $4.562 \times 3.99870 \div (452.6755 - 452.33)$
- (d) $(14.84 \times 0.55) - 8.02$

SOLUTION

(a) Round the intermediate result (in blue) to three significant figures to reflect the three significant figures in the least precisely known quantity (1.10).	$\begin{aligned} 1.10 \times 0.5120 \times 4.0015 \div 3.4555 \\ &= 0.65219 \\ &= 0.652 \end{aligned}$
(b) Round the intermediate answer (in blue) to one decimal place to reflect the quantity with the fewest decimal places (105.1). Notice that 105.1 is not the quantity with the fewest significant figures, but it has the fewest decimal places and therefore determines the number of decimal places in the answer.	$\begin{array}{r} 0.355 \\ +105.1 \\ -100.5820 \\ \hline 4.8730 = 4.9 \end{array}$
(c) Mark the intermediate result to two decimal places to reflect the number of decimal places in the quantity within the parentheses having the smallest number of decimal places (452.33). Round the final answer to two significant figures to reflect the two significant figures in the least precisely known quantity (0.3455).	$\begin{aligned} 4.562 \times 3.99870 \div (452.6755 - 452.33) \\ &= 4.562 \times 3.99870 \div 0.3455 \\ &= 52.79904 \\ &= 53 \end{aligned}$ <div>2 places of the decimal</div>
(d) Mark the intermediate result to two significant figures to reflect the number of significant figures in the quantity within the parentheses having the smallest number of significant figures (0.55). Round the final answer to one decimal place to reflect the one decimal place in the least precisely known quantity (8.162).	$\begin{aligned} (14.84 \times 0.55) - 8.02 &= 8.162 - 8.02 \\ &= 0.142 \\ &= 0.1 \end{aligned}$

FOR PRACTICE E.4

Perform each calculation to the correct number of significant figures.

- (a) $3.10007 \times 9.441 \times 0.0301 \div 2.31$
- (b)
$$\begin{array}{r} 0.881 \\ +132.1 \\ -12.02 \end{array}$$
- (c) $2.5110 \times 21.20 \div (44.11 + 1.223)$
- (d) $(12.01 \times 0.3) + 4.811$

E.5

Density

TABLE E.4 The Density of Some Common Substances at 20 °C

Substance	Density (g/cm ³)
Charcoal (from oak)	0.57
Ethanol	0.789
Ice	0.917 (at 0 °C)
Water	1.00 (at 4 °C)
Sugar (sucrose)	1.58
Table salt (sodium chloride)	2.16
Glass	2.6
Aluminum	2.70
Titanium	4.51
Iron	7.86
Copper	8.96
Lead	11.4
Mercury	13.55
Gold	19.3
Platinum	21.4

An old riddle asks, “Which weighs more, a ton of bricks or a ton of feathers?” The answer, of course, is neither—they both weigh the same (1 ton). If you answered bricks, you confused weight with density. The **density** (*d*) of a substance is the ratio of its mass (*m*) to its volume (*V*):

$$\text{density} = \frac{\text{mass}}{\text{volume}} \quad \text{or} \quad d = \frac{m}{V}$$

Density is a characteristic physical property of a substance. The density of a substance also depends on its temperature. Density is an example of an **intensive property**, one that is *independent* of the amount of the substance. The density of aluminum, for example, is the same whether we have a gram or a kilogram. We can use intensive properties to identify substances because these properties depend only on the type of substance, not on the amount of it. For example, in Table E.4 we can see that pure gold has a density of 19.3 g/cm³. One way to determine whether a substance is pure gold is to measure its density and compare it to 19.3 g/cm³. Mass, in contrast, is an **extensive property**, one that depends on the amount of the substance. If we know only the mass of a sample of gold, that information alone will not allow us to identify it as gold.

The units of density are those of mass divided by volume. Although the SI-derived unit for density is kg/m³, we most often express the density of liquids and solids in g/cm³ or g/mL. (Remember that cm³ and mL are equivalent units: 1 cm³ = 1 mL.) Aluminum is one of the least dense structural metals with a density of 2.7 g/cm³, while platinum is one of the densest metals with a density of 21.4 g/cm³.

We calculate the density of a substance by dividing the mass of a given amount of the substance by its volume. For example, suppose a small nugget we suspect to be gold has a mass of 22.5 g and a volume of 2.38 cm³. To find its density, we divide the mass by the volume:

$$d = \frac{m}{V} = \frac{22.5 \text{ g}}{2.38 \text{ cm}^3} = 9.45 \text{ g/cm}^3$$

In this case, the density reveals that the nugget is not pure gold.

EXAMPLE E.5

Calculating Density

A man receives a ring from his fiancée, who tells him that it is made out of platinum. Before the wedding, he notices that the ring feels a little light for its size and decides to measure its density. He places the ring on a balance and finds that it has a mass of 3.15 g. He then finds that the ring displaces 0.233 cm³ of water. Is the ring made of platinum? Assume that the measurements occurred at 20 °C. (*Note:* The volume of irregularly shaped objects is often measured by the displacement of water. In this method, the object is placed in water, and the change in volume of the water is measured. The increase in the total volume represents the volume of water *displaced* by the object and is equal to the volume of the object.)

Set up the problem by writing the important information that is *given* as well as the information that you are asked to *find*. In this case, you are to find the density of the ring and compare it to that of platinum.

Note: This standardized way of setting up problems is discussed in detail in Section E.8.

GIVEN: *m* = 3.15 g
V = 0.233 cm³
FIND: density in g/cm³

Next, write down the equation that defines density.

EQUATION: $d = \frac{m}{V}$

Solve the problem by substituting the correct values of mass and volume into the expression for density.

SOLUTION

$$d = \frac{m}{V} = \frac{3.15 \text{ g}}{0.233 \text{ cm}^3} = 13.5 \text{ g/cm}^3$$

The density of the ring is much too low to be platinum (platinum density is 21.4 g/cm³). Therefore, the ring is a fake.

FOR PRACTICE E.5

The fiancée in Example E.5 is shocked that the ring is fake and returns it. She buys a new ring that has a volume of 0.212 cm^3 . If the new ring is indeed pure platinum, what is its mass?

FOR MORE PRACTICE E.5

A metal cube has an edge length of 11.4 mm and a mass of 6.67 g. Calculate the density of the metal and refer to Table E.4 to determine the likely identity of the metal.

Density

The density of copper decreases as temperature increases (as does the density of most substances). Which statement accurately describes the changes in a sample of copper when it is warmed from room temperature to 95°C ?

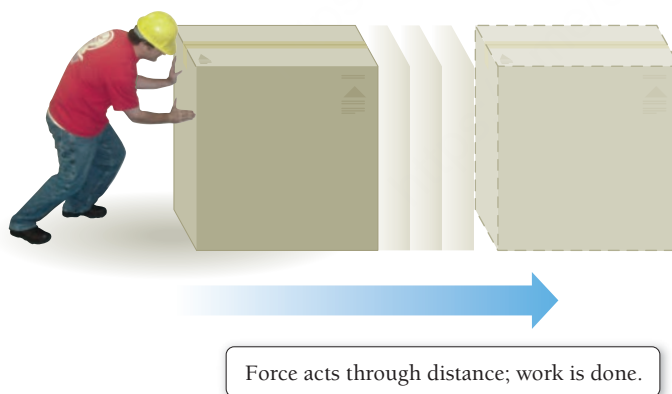
- (a) The sample becomes lighter. (b) The sample becomes heavier.
(c) The sample expands. (d) The sample contracts.

E.2**Cc**Conceptual
Connection**E.6 Energy and Its Units**


The two fundamental components of our universe are matter, which we will discuss in Chapter 1, and energy, which we introduce briefly here. We first introduce the basic nature of energy, then we define its units, and lastly we discuss how we quantify changes in energy.

The Nature of Energy

The basic definition of **energy** is *the capacity to do work*. **Work** is defined as the action of a force through a distance. For instance, when you push a box across the floor or pedal your bicycle down the street, you do work.

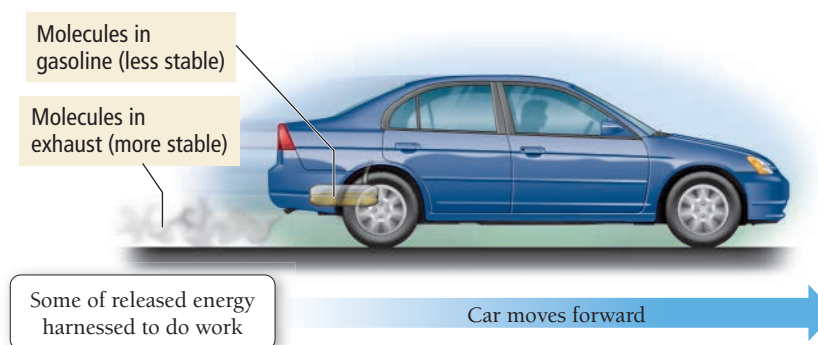


The *total energy* of an object is a sum of its **kinetic energy**, the energy associated with its motion, and its **potential energy**, the energy associated with its position or composition. For example, a weight held several meters above the ground has potential energy due to its position within Earth's gravitational field (**Figure E.6** ▶). If you drop the weight, it accelerates, and its potential energy is converted to kinetic energy. When the weight hits the ground, its kinetic energy is converted primarily to **thermal energy**, the energy associated with the temperature of an object. Thermal energy is actually a type of kinetic energy because it arises from the motion of the individual atoms or molecules that make up an object. When the weight hits the ground, its kinetic energy is essentially transferred to the atoms and molecules that compose the ground, raising the temperature of the ground ever so slightly.



▲ FIGURE E.6 Energy Changes Gravitational potential energy is converted into kinetic energy when the weight is released. The kinetic energy is converted mostly to thermal energy when the weight strikes the ground.

► **FIGURE E.7 Using Chemical Energy to Do Work** Gasoline molecules have high potential energy. When they are burned, they form molecules with lower potential energy. The difference in potential energy can be harnessed to move the car.



In Chapter 20 we will discuss how energy conservation is actually part of a more general law that allows for the interconvertibility of mass and energy.

The first principle to note about the way energy changes as the weight falls to the ground is that *energy is neither created nor destroyed*. The potential energy of the weight becomes kinetic energy as the weight accelerates toward the ground. The kinetic energy then becomes thermal energy when the weight hits the ground. The total amount of thermal energy that is released through the process is exactly equal to the initial potential energy of the weight. The idea that energy is neither created nor destroyed is known as the **law of conservation of energy**. Although energy can change from one type into another and it can flow from one object to another, the *total quantity* of energy does not change—it remains constant.

The second principle to note about the raised weight and its fall is *the tendency of systems with high potential energy to change in a way that lowers their potential energy*. For this reason, objects or systems with high potential energy tend to be *unstable*. The weight lifted several meters from the ground is unstable because it contains a significant amount of potential energy. Unless restrained, the weight will naturally fall, lowering its potential energy. We can harness some of the raised weight's potential energy to do work. For example, we can attach the weight to a rope that turns a paddle wheel or spins a drill as the weight falls. After the weight falls to the ground, it contains less potential energy—it has become more *stable*.

Some chemical substances are like a raised weight. For example, the molecules that compose gasoline have a relatively high potential energy—energy is concentrated in them just as energy is concentrated in a raised weight. The molecules in the gasoline tend to undergo chemical changes (specifically combustion) that lower their potential energy. As the energy of the molecules in gasoline is released, some of it can be harnessed to do work, such as moving a car forward (**Figure E.7** ▲). The molecules that result from the chemical change have less potential energy than the original molecules in gasoline and are more stable.

Chemical potential energy, such as the energy contained in the molecules that compose gasoline, arises primarily from electrostatic forces (see Section 1.6) between the electrically charged particles (protons and electrons) that compose atoms and molecules. Recall that molecules contain specific, usually complex, arrangements of protons and electrons. Some of these arrangements—such as the one within the molecules that compose gasoline—have a much higher potential energy than others. When gasoline undergoes combustion, the arrangement of these particles changes, creating molecules with lower potential energy and transferring energy (mostly in the form of heat) to the surroundings. In other words, the structure of a molecule—the way its protons and electrons are arranged—determines the potential energy of the molecule, which in turn determines its properties.

Energy Units

We can deduce the units of energy from the definition of kinetic energy. An object of mass m , moving at velocity v , has a kinetic energy (KE) given by:

$$\text{KE} = \frac{1}{2}mv^2$$

kg
m/s

The SI unit of mass is the kg, and the unit of velocity is m/s. The SI unit of energy is $\text{kg} \cdot \text{m}^2/\text{s}^2$, defined as the **joule (J)**, named after the English scientist James Joule (1818–1889).

$$1 \text{ kg} \frac{\text{m}^2}{\text{s}^2} = 1 \text{ J}$$

One joule is a relatively small amount of energy—for example, a 100-watt light bulb uses 3.6×10^5 J in 1 hour. Therefore, we often use the kilojoule (kJ) in our energy discussions and calculations (1 kJ = 1000 J). A second common unit of energy is the **calorie (cal)**, originally defined as the amount of energy required to raise the temperature of 1 g of water by 1 °C. The current definition is 1 cal = 4.184 J (exact); a calorie is a larger unit than a joule. A related energy unit is the nutritional, or uppercase “C” **Calorie (Cal)**, equivalent to 1000 lowercase “c” calories. The Calorie is the same as a kilocalorie (kcal): 1 Cal = 1 kcal = 1000 cal. Electricity bills typically are based on another, even larger, energy unit, the **kilowatt-hour (kWh)**: 1 kWh = 3.60×10^6 J. Electricity costs \$0.08–\$0.15 per kWh. Table E.5 lists various energy units and their conversion factors. Table E.6 shows the amount of energy required for various processes.

TABLE E.5 Energy Conversion Factors*

1 calorie (Cal)	= 4.184 joules (J)
1 Calorie (Cal) or kilocalorie (kcal)	= 1000 cal = 4184 J
1 kilowatt-hour (kWh)	= 3.60×10^6 J

*All conversion factors in this table are exact.

TABLE E.6 Energy Uses in Various Units

Unit	Amount Required to Raise Temperature of 1 g of Water by 1 °C	Amount Required to Light 100-W Bulb for 1 Hour	Amount Used by Human Body in Running 1 Mile (Approximate)	Amount Used by Average U.S. Citizen in 1 Day
joule (J)	4.18	3.60×10^5	4.2×10^5	9.0×10^8
calorie (cal)	1.00	8.60×10^4	1.0×10^5	2.2×10^8
Calorie (Cal)	0.00100	86.0	100	2.2×10^5
kilowatt-hour (kWh)	1.16×10^{-6}	0.100	0.12	2.5×10^2

The “calorie” referred to on all nutritional labels (regardless of the capitalization) is always the capital C Calorie.



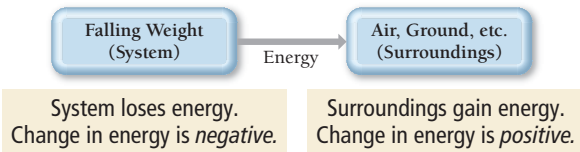
3.6×10^5 J or 0.10 kWh
used in 1 hour

▲ A watt (W) is 1 J/s, so a 100-W light bulb uses 100 J every second or 3.6×10^5 J every hour.

Quantifying Changes in Energy

Recall that energy is conserved in any process—it is neither created nor destroyed. However, energy can be transferred from one object or system to another. For example, when a raised weight is dropped, its potential energy is transferred to its surroundings as heat, or when gasoline is burned in an automobile engine, its potential energy is transferred to the kinetic energy associated with the motion of the car.

In this book, we always view the transfer of energy from the point of view of the *system* under observation. For example, if we drop a weight, we can define the weight as the system. As the weight drops, it loses energy to the *surroundings*. The *surroundings* include anything with which the system interacts. Notice that, for the falling weight, the system *loses* energy and the surroundings *gain* energy.



We can think of the energy of the system in the same way that we think of the balance in a checking account. The loss of energy from the system carries a negative sign, just like a withdrawal from a checking account carries a negative sign. Conversely, a gain in energy by the system carries a positive sign, just like a deposit in a checking account carries a positive sign.

Chemical processes almost always involve energy changes. For example, as we saw previously, when we burn gasoline, energy is given off. If we define the gasoline as the system, then the system loses energy (the change in energy is negative). Processes in which the system loses thermal energy are **exothermic**, and the change in energy is negative. In contrast, processes in which the system gains thermal energy are **endothermic**, and the change in energy is positive. For example, the chemical cold packs often used to ice athletic injuries contain substances within them that undergo an endothermic reaction when mixed. If we define the chemicals in the cold pack as the system, then the energy absorbed by the system cools down the muscle (which is acting as part of the surroundings) and helps prevent swelling.

Summarizing Energy and Its Units:

- Energy is the capacity to do work and is commonly measured in joules (J).
- Energy is conserved in any process but can be transferred between a system and its surroundings.
- An exothermic process involves the transfer of energy *from* the system *to* the surroundings and carries a negative sign (like a withdrawal from a checking account).
- An endothermic process involves the transfer of energy *to* the system *from* the surroundings and carries a positive sign (like a deposit into a checking account).



Conceptual
Connection

Energy Changes

Is the burning of natural gas in a stove exothermic or endothermic? What is the sign of the energy change?

E.7 Converting between Units

Knowing how to work with and manipulate units in calculations is central to solving chemical problems. In calculations, units can help us determine if an answer is correct. Using units as a guide to solving problems is called **dimensional analysis**. Always include units in your calculations; multiply, divide, and cancel them like any other algebraic quantity.

Consider converting 12.5 inches (in) to centimeters (cm). We know from the table in the inside back cover of this book that 1 in = 2.54 cm (exact), so we can use this quantity in the calculation:

$$12.5 \text{ in} \times \frac{2.54 \text{ cm}}{1 \text{ in}} = 31.8 \text{ cm}$$

The unit, in, cancels and we are left with cm as our final unit. The quantity $\frac{2.54 \text{ cm}}{1 \text{ in}}$ is a **conversion factor**—a fractional quantity with the units we are *converting from* on the bottom and the units we are *converting to* on the top. Conversion factors are constructed from any two equivalent quantities. In this example, 2.54 cm = 1 in, so we construct the conversion factor by dividing both sides of the equality by 1 in and canceling the units:

$$2.54 \text{ cm} = 1 \text{ in}$$

$$\frac{2.54 \text{ cm}}{1 \text{ in}} = \frac{1 \text{ in}}{1 \text{ in}}$$

$$\frac{2.54 \text{ cm}}{1 \text{ in}} = 1$$

Because the quantity $\frac{2.54 \text{ cm}}{1 \text{ in}}$ is equivalent to 1, multiplying by the conversion factor affects only the units, not the actual quantity. To convert the other way, from centimeters to inches, we must—using units as a guide—use a different form of the conversion factor. If we accidentally use the same form, we will get the wrong result, indicated by erroneous units. For example, suppose that we want to convert 31.8 cm to inches:

$$31.8 \text{ cm} \times \frac{2.54 \text{ cm}}{1 \text{ in}} = \frac{80.8 \text{ cm}^2}{\text{in}}$$

The units in the above answer (cm^2/in), as well as the value of the answer, are obviously wrong. We know that an inch is a larger unit than a centimeter; therefore, the conversion of a value from cm to in should give us a smaller number, not a larger one. When we solve a problem, we always look at the final units. Are they the desired units? We always look at the magnitude of the numerical answer as well. Does it make sense? In this case, the mistake was the form of the conversion factor. It should have been inverted so that the units cancel as follows:

$$31.8 \text{ cm} \times \frac{1 \text{ in}}{2.54 \text{ cm}} = 12.5 \text{ in}$$

We can invert conversion factors because they are equal to 1 and the inverse of 1 is 1. Therefore,

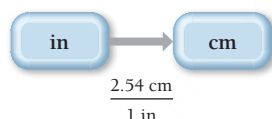
$$\frac{2.54 \text{ cm}}{1 \text{ in}} = 1 = \frac{1 \text{ in}}{2.54 \text{ cm}}$$

Most unit conversion problems take the form:

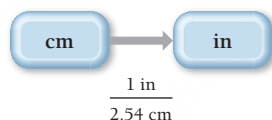
$$\text{information given} \times \text{conversion factor(s)} = \text{information sought}$$

$$\text{given unit} \times \frac{\text{desired unit}}{\text{given unit}} = \text{desired unit}$$

In this book, we diagram problem solutions using a *conceptual plan*. A conceptual plan is a visual outline that helps us to see the general flow of the problem solution. For unit conversions, the conceptual plan focuses on units and the conversion from one unit to another. The conceptual plan for converting in to cm is:



The conceptual plan for converting the other way, from cm to in, is just the reverse, with the reciprocal conversion factor:



Each arrow in a conceptual plan for a unit conversion has an associated conversion factor with the units of the previous step in the denominator and the units of the following step in the numerator. In Section E.8, we incorporate the idea of a conceptual plan into an overall approach to solving numerical chemical problems.

Unit Conversion

E.4

Cc

Conceptual Connection



The engineers involved in the Mars Climate Orbiter disaster entered the trajectory corrections in units of pound·second. Which conversion factor should they have multiplied their values by to convert them to the correct units of newton·second? (Recall from Section E.1 that 1 pound·second = 4.45 newton·second.)

- (a) $\frac{1 \text{ pound} \cdot \text{second}}{4.45 \text{ newton} \cdot \text{second}}$
- (b) $\frac{4.45 \text{ newton} \cdot \text{second}}{1 \text{ pound} \cdot \text{second}}$
- (c) $\frac{1 \text{ newton} \cdot \text{second}}{4.45 \text{ pound} \cdot \text{second}}$
- (d) $\frac{4.45 \text{ pound} \cdot \text{second}}{1 \text{ newton} \cdot \text{second}}$



KEY CONCEPT VIDEO
Solving Chemical Problems

The eText 2.0 icon indicates that this feature is embedded and interactive in the eText.

E.8 Problem-Solving Strategies

Problem solving is one of the most important skills you will acquire in this course. No one succeeds in chemistry—or in life, really—without the ability to solve problems. Although there is no simple formula you can apply to every chemistry problem, you can learn problem-solving strategies and begin to develop some chemical intuition. Many of the problems you will solve in this course are *unit conversion problems*, where you are given one or more quantities in some unit and asked to convert them into different units (see Section E.7). Other problems require that you use *specific equations* to get to the information you are trying to find. In the sections that follow, you will find strategies to help you solve both of these types of problems. Of course, many problems contain both conversions and equations, requiring the combination of these strategies, and some problems require an altogether different approach.

In this book, we use a standard problem-solving procedure that you can adapt to many of the problems encountered in general chemistry and beyond. To solve any problem, you need to assess the information given in the problem and devise a way to get to the information asked for. In other words, you must:

- Identify the starting point (the *given* information).
- Identify the endpoint (what we must *find*).
- Devise a way to get from the starting point to the endpoint using what is given as well as what you already know or can look up. (As we just discussed, we call this the *conceptual plan*.)

In graphic form, we represent this progression as:

Given \longrightarrow Conceptual Plan \longrightarrow Find

One of the principal difficulties beginning students encounter when they try to solve problems in general chemistry is not knowing where to begin. While no problem-solving procedure is applicable to all problems, the following four-step procedure can be helpful in working through many of the numerical problems you encounter in this book:

1. **Sort.** Begin by sorting the information in the problem. *Given* information is the basic data provided by the problem—often one or more numbers with their associated units. *Find* indicates what the problem is asking you to find.
2. **Strategize.** This is usually the most challenging part of solving a problem. In this process, you must develop a *conceptual plan*—a series of steps that will get you from the given information to the information you are trying to find. You have already seen conceptual plans for simple unit conversion problems. Each arrow in a conceptual plan represents a computational step. On the left side of the arrow is the quantity you had before the step; on the right side of the arrow is the quantity you will have after the step; and below the arrow is the information you need to get from one to the other—the relationship between the quantities.

Often such relationships take the form of conversion factors or equations. These may be given in the problem, in which case you will have written them down under “Given” in Step 1. Usually, however, you will need other information—which may include physical constants, formulas, or conversion factors—to help get you from what you are given to what you must find. This information comes from what you have learned or what you can look up in the chapter or in tables within the book.

In some cases, you may get stuck at the strategize step. If you cannot figure out how to get from the given information to the information you are asked to find, you might try working backwards. For example, you can look at the units of the quantity you are trying to find and try to find conversion factors to get to the units of the given quantity. You may even try a combination of strategies; work forwards, backwards, or some of both. If you persist, you will develop a strategy to solve the problem.

3. **Solve.** This is the easiest part of solving a problem. Once you set up the problem properly and devise a conceptual plan, you follow the plan to solve the problem. Carry out any mathematical operations (paying attention to the rules for significant figures in calculations) and cancel units as needed.
4. **Check.** This is the step beginning students most often overlook. Experienced problem solvers always ask, does this answer make sense? Are the units correct? Is the number of significant figures

Most problems can be solved in more than one way. The solutions in this book tend to be the most straightforward but certainly not the only ways to solve the problems.

correct? When solving multistep problems, errors easily creep into the solution. You can catch most of these errors by simply checking the answer. For example, suppose you are calculating the number of atoms in a gold coin and end up with an answer of 1.1×10^{-6} atoms. Could the gold coin really be composed of one-millionth of one atom?

In Examples E.6 and E.7, we apply this problem-solving procedure to unit conversion problems. The procedure is summarized in the left column, and two examples of the procedure are provided in the middle and right columns. This three-column format is used in selected examples throughout this text. This format allows you to see how you can apply a particular procedure to two different problems. Work through one problem first (from top to bottom) and then apply the same procedure to the other problem. Recognizing the commonalities and differences between problems is a key part of developing problem-solving skills.

Interactive Worked
Example Video E.7



EXAMPLE E.6

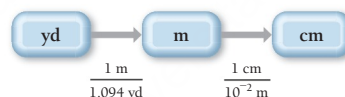
Unit Conversion

Convert 1.76 yards to centimeters.

GIVEN: 1.76 yd

FIND: cm

CONCEPTUAL PLAN



RELATIONSHIPS USED

$$1.094 \text{ yd} = 1 \text{ m}$$

$$1 \text{ cm} = 10^{-2} \text{ m}$$

(These conversion factors are in the inside back cover of your book.)

SOLUTION

$$\begin{aligned}
 1.76 \text{ yd} &\times \frac{1 \text{ m}}{1.094 \text{ yd}} \times \frac{1 \text{ cm}}{10^{-2} \text{ m}} \\
 &= 160.8775 \text{ cm} \\
 160.8775 \text{ cm} &= 161 \text{ cm}
 \end{aligned}$$

PROCEDURE FOR Solving Unit Conversion Problems

SORT Begin by sorting the information in the problem into *given* and *find*.

STRATEGIZE Devise a *conceptual plan* for the problem. Begin with the *given* quantity and symbolize each conversion step with an arrow. Below each arrow, write the appropriate conversion factor for that step. Focus on the units. The conceptual plan should end at the *find* quantity and its units. In these examples, the other information you need consists of relationships between the various units as shown.

SOLVE Follow the conceptual plan. Begin with the *given* quantity and its units. Multiply by the appropriate conversion factor(s), canceling units, to arrive at the *find* quantity. Round the answer to the correct number of significant figures following guidelines in Section E.4. Remember that exact conversion factors do not limit significant figures.

CHECK Check your answer. Are the units correct? Does the answer make sense?

FOR PRACTICE E.6

Convert 288 cm to yards.

EXAMPLE E.7

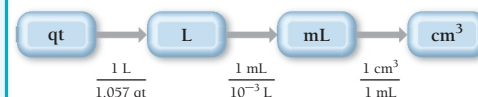
Unit Conversion

Convert 1.8 quarts to cubic centimeters.

GIVEN: 1.8 qt

FIND: cm^3

CONCEPTUAL PLAN



RELATIONSHIPS USED

$$1.057 \text{ qt} = 1 \text{ L}$$

$$1 \text{ mL} = 10^{-3} \text{ L}$$

$$1 \text{ mL} = 1 \text{ cm}^3$$

(These conversion factors are in the inside back cover of your book.)

SOLUTION

$$\begin{aligned}
 1.8 \text{ qt} &\times \frac{1 \text{ L}}{1.057 \text{ qt}} \times \frac{1 \text{ mL}}{10^{-3} \text{ L}} \times \frac{1 \text{ cm}^3}{1 \text{ mL}} \\
 &= 1.70293 \times 10^3 \text{ cm}^3 \\
 1.70293 \times 10^3 \text{ cm}^3 &= 1.7 \times 10^3 \text{ cm}^3
 \end{aligned}$$

The units (cm^3) are correct. The magnitude of the answer (1700) makes sense because a cubic centimeter is a much smaller unit than a quart.

FOR PRACTICE E.7

Convert 9255 cm^3 to gallons.

Units Raised to a Power

When building conversion factors for units raised to a power, remember to raise both the number and the unit to the power. For example, to convert from in² to cm², you construct the conversion factor as follows:

2.54 cm = 1 in

$(2.54\text{ cm})^2 = (1\text{ in})^2$

$(2.54)^2\text{ cm}^2 = 1^2\text{ in}^2$

$6.45\text{ cm}^2 = 1\text{ in}^2$

$\frac{6.45\text{ cm}^2}{1\text{ in}^2} = 1$

Example E.8 demonstrates how to use conversion factors involving units raised to a power.

EXAMPLE E.8

Interactive
Worked Example
Video E.8

PEARSON
eText
2.0

Unit Conversions Involving Units Raised to a Power

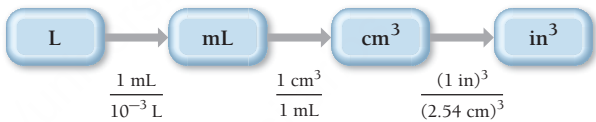
Calculate the displacement (the total volume of the cylinders through which the pistons move) of a 5.70-L automobile engine in cubic inches.

SORT Sort the information in the problem into *given* and *find*.

GIVEN: 5.70 L
FIND: in³

STRATEGIZE Write a conceptual plan. Begin with the given information and devise a path to the information that you are asked to find. Notice that for cubic units, you must cube the conversion factors.

CONCEPTUAL PLAN



RELATIONSHIPS USED

1 mL = 10^{−3} L
1 mL = 1 cm³
2.54 cm = 1 in
(These conversion factors are in the inside back cover of your book.)

SOLVE Follow the conceptual plan to solve the problem. Round the answer to three significant figures to reflect the three significant figures in the least precisely known quantity (5.70 L). These conversion factors are all exact and therefore do not limit the number of significant figures.

SOLUTION

$$5.70\text{ L} \times \frac{1\text{ mL}}{10^{-3}\text{ L}} \times \frac{1\text{ cm}^3}{1\text{ mL}} \times \frac{(1\text{ in})^3}{(2.54\text{ cm})^3} = 347.835\text{ in}^3$$
$$= 348\text{ in}^3$$

CHECK The units of the answer are correct, and the magnitude makes sense. The unit cubic inches is smaller than liters, so the volume in cubic inches should be larger than the volume in liters.

FOR PRACTICE E.8

How many cubic centimeters are there in 2.11 yd³?

FOR MORE PRACTICE E.8

A vineyard has 145 acres of Chardonnay grapes. A particular soil supplement requires 5.50 g for every square meter of vineyard. How many kilograms of the soil supplement are required for the entire vineyard? (1 km² = 247 acres)

EXAMPLE E.9**Density as a Conversion Factor**Interactive
Worked Example
Video E.9PEARSON
eText
2.0

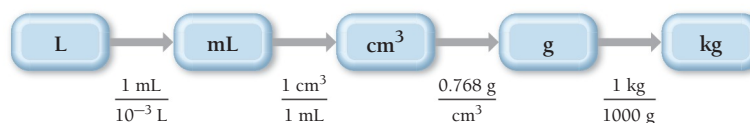
The mass of fuel in a jet must be calculated before each flight to ensure that the jet is not too heavy to fly. A 747 is fueled with 173,231 L of jet fuel. If the density of the fuel is 0.768 g/cm^3 , what is the mass of the fuel in kilograms?

SORT Begin by sorting the information in the problem into *given* and *find*.

GIVEN: fuel volume = 173,231 L
density of fuel = 0.768 g/cm^3

FIND: mass in kg

STRATEGIZE Draw the conceptual plan beginning with the given quantity, in this case the volume in liters (L). Your overall goal in this problem is to find the mass. You can convert between volume and mass using density (g/cm^3). However, you must first convert the volume to cm^3 . Once you have converted the volume to cm^3 , use the density to convert to g. Finally, convert g to kg.

CONCEPTUAL PLAN**RELATIONSHIPS USED**

$$1 \text{ mL} = 10^{-3} \text{ L}$$

$$1 \text{ mL} = 1 \text{ cm}^3$$

$$d = 0.768 \text{ g/cm}^3$$

$$1000 \text{ g} = 1 \text{ kg}$$

(These conversion factors are in the inside back cover of your book.)

SOLVE Follow the conceptual plan to solve the problem. Round the answer to three significant figures to reflect the three significant figures in the density.

SOLUTION

$$\begin{aligned}
 173,231 \text{ L} &\times \frac{1 \text{ mL}}{10^{-3} \text{ L}} \times \frac{1 \text{ cm}^3}{1 \text{ mL}} \times \frac{0.768 \text{ g}}{1 \text{ cm}^3} \times \frac{1 \text{ kg}}{1000 \text{ g}} \\
 &= 1.33 \times 10^5 \text{ kg}
 \end{aligned}$$

CHECK The units of the answer (kg) are correct. The magnitude makes sense because the mass ($1.33 \times 10^5 \text{ kg}$) is similar in magnitude to the given volume (173,231 L or $1.73231 \times 10^5 \text{ L}$), as you would expect for a density close to one (0.768 g/cm^3).

FOR PRACTICE E.9

Backpackers often use canisters of white gas to fuel a cooking stove's burner. If one canister contains 1.45 L of white gas and the density of the gas is 0.710 g/cm^3 , what is the mass of the fuel in kilograms?

FOR MORE PRACTICE E.9

A drop of gasoline has a mass of 22 mg and a density of 0.754 g/cm^3 . What is its volume in cubic centimeters?

Order-of-Magnitude Estimations

Calculation is an integral part of chemical problem solving, but precise numerical calculation is not always necessary, or even possible. Sometimes data are only approximate; other times we do not need a high degree of precision—a rough estimate or a simplified “back of the envelope” calculation is enough. We can also use approximate calculations to get an initial feel for a problem, or as a quick check to see whether our solution is in the right ballpark.

One way to make such estimates is to simplify the numbers so that they can be manipulated easily. In the technique known as *order-of-magnitude estimation*, we focus only on the exponential part of numbers written in scientific notation, according to these guidelines:

- If the decimal part of the number is less than 5, we drop it. Thus, 4.36×10^5 becomes 10^5 and 2.7×10^{-3} becomes 10^{-3} .
- If the decimal part of the number is 5 or more, we round it up to 10 and rewrite the number as a power of 10. Thus, 5.982×10^7 becomes $10 \times 10^7 = 10^8$, and 6.1101×10^{-3} becomes $10 \times 10^{-3} = 10^{-2}$.

After we make these approximations, we are left with powers of 10, which are easier to multiply and divide. Of course, our answer is only as reliable as the numbers used to get it, so we should not assume that the results of an order-of-magnitude calculation are accurate to more than an order of magnitude.

Suppose, for example, that we want to estimate the number of atoms that an immortal being could have counted in the 13.7 billion (1.37×10^{10}) years that the universe has been in existence, assuming a counting rate of 10 atoms per second. Since a year has 3.2×10^7 seconds, we can approximate the number of atoms counted as:

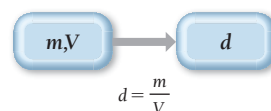
$$\begin{array}{ccccccc}
 10^{10} \text{ years} & \times & 10^7 \frac{\text{seconds}}{\text{year}} & \times & 10^1 \frac{\text{atoms}}{\text{second}} & \approx & 10^{18} \text{ atoms} \\
 \text{(number of years)} & & \text{(number of seconds per year)} & & \text{(number of atoms counted per second)} & &
 \end{array}$$

A million trillion atoms (10^{18}) may seem like a lot, but a speck of matter made up of a million trillion atoms is nearly impossible to see without a microscope.

In our general problem-solving procedure, the last step is to check whether the results seem reasonable. Order-of-magnitude estimations can often help us to catch mistakes that we may make in a detailed calculation, such as entering an incorrect exponent or sign into a calculator, or multiplying when we should have divided.

E.9 Solving Problems Involving Equations

We can solve problems involving equations in much the same way as problems involving conversions. Usually, in problems involving equations, we are asked to find one of the variables in the equation, given the others. For example, suppose we are given the mass (m) and volume (V) of a sample and asked to calculate its density. A conceptual plan shows how the *equation* takes us from the *given* quantities to the *find* quantity.



Here, instead of a conversion factor under the arrow, the conceptual plan has an equation. The equation shows the *relationship* between the quantities on the left of the arrow and the quantities on the right. Note that at this point, the equation need not be solved for the quantity on the right (although in this particular case it is). The procedure that follows, as well as Examples E.10 and E.11, guides you through solutions to problems involving equations. We again use the three-column format. Work through one problem from top to bottom and then apply the same general procedure to the second problem.

PROCEDURE FOR
Solving Problems
Involving Equations

SORT Begin by sorting the information into *given* and *find*.

STRATEGIZE Write a conceptual plan for the problem. Focus on the equation(s). The conceptual plan shows how the equation takes you from the *given* quantity (or quantities) to the *find* quantity. The conceptual plan may have several parts, involving other equations or required conversions. In these examples, you use the geometrical relationships given in the problem statements as well as the definition of density, $d = m/V$, which you learned in this chapter.

SOLVE Follow the conceptual plan. Solve the equation(s) for the *find* quantity (if it is not solved already). Gather each of the quantities that must go into the equation in the correct units. (Convert to the correct units if necessary.) Substitute the numerical values and their units into the equation(s) and calculate the answer. Round the answer to the correct number of significant figures.

CHECK Check your answer. Are the units correct? Does the answer make sense?

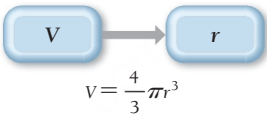
EXAMPLE E.10

Problems with Equations

Find the radius (r), in centimeters, of a spherical water droplet with a volume (V) of 0.058 cm^3 . For a sphere, $V = (4/3)\pi r^3$.

GIVEN: $V = 0.058\text{ cm}^3$
FIND: r in cm

CONCEPTUAL PLAN



RELATIONSHIPS USED

$$V = \frac{4}{3}\pi r^3$$

SOLUTION

$$\begin{aligned} V &= \frac{4}{3}\pi r^3 \\ r^3 &= \frac{3}{4\pi}V \\ r &= \left(\frac{3}{4\pi}V\right)^{1/3} \\ &= \left(\frac{3}{4\pi}0.058\text{ cm}^3\right)^{1/3} \\ &= 0.24013\text{ cm} \\ 0.24013\text{ cm} &= 0.24\text{ cm} \end{aligned}$$

The units (cm) are correct, and the magnitude makes sense.

FOR PRACTICE E.10

Find the radius (r) of an aluminum cylinder that is 2.00 cm long and has a mass of 12.4 g . For a cylinder, $V = \pi r^2l$.

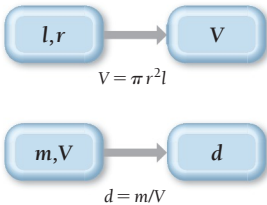
EXAMPLE E.11

Problems with Equations

Find the density (in g/cm^3) of a metal cylinder with a mass (m) of 8.3 g , a length (l) of 1.94 cm , and a radius (r) of 0.55 cm . For a cylinder, $V = \pi r^2l$.

GIVEN: $m = 8.3\text{ g}$
 $l = 1.94\text{ cm}$
 $r = 0.55\text{ cm}$
FIND: d in g/cm^3

CONCEPTUAL PLAN



RELATIONSHIPS USED

$$\begin{aligned} V &= \pi r^2l \\ d &= \frac{m}{V} \end{aligned}$$

SOLUTION

$$\begin{aligned} V &= \pi r^2l \\ &= \pi(0.55\text{ cm})^2(1.94\text{ cm}) \\ &= 1.8436\text{ cm}^3 \\ d &= \frac{m}{V} \\ &= \frac{8.3\text{ g}}{1.8436\text{ cm}^3} = 4.50195\text{ g/cm}^3 \\ 4.50195\text{ g/cm}^3 &= 4.5\text{ g/cm}^3 \end{aligned}$$

The units (g/cm^3) are correct. The magnitude of the answer seems correct for one of the lighter metals (see Table E.4).

FOR PRACTICE E.11

Find the density, in g/cm^3 , of a metal cube with a mass of 50.3 g and an edge length (l) of 2.65 cm . For a cube, $V = l^3$.

SELF-ASSESSMENT

QUIZ

The eText 2.0 icon indicates that this feature is embedded and interactive in the eText.



1. Convert 85.0 °F to K.
a) 181.1 K
b) 358 K
c) 29.4 K
d) 302.6 K
2. Express the quantity 33.2×10^{-4} m in mm.
a) 33.2 mm
b) 3.32 mm
c) 0.332 mm
d) 3.32×10^{-6} mm
3. How many significant figures are there in the number 0.080320?
a) 3
b) 4
c) 5
d) 6
4. Perform the calculation to the correct number of significant figures.
 $(43.998 \times 0.00552)/2.002$
a) 0.121
b) 0.12
c) 0.12131
d) 0.1213
5. Perform the calculation to the correct number of significant figures.
 $(8.01 - 7.50)/3.002$
a) 0.1698867
b) 0.17
c) 0.170
d) 0.1700
6. What is the mass of a 1.75-L sample of a liquid that has a density of 0.921 g/mL?
a) 1.61×10^3 g
b) 1.61×10^{-3} g
c) 1.90×10^3 g
d) 1.90×10^{-3} g
7. Convert 1,285 cm² to m².
a) 1.285×10^7 m²
b) 12.85 m²
c) 0.1285 m²
d) 1.285×10^5 m²

8. Three samples, each of a different substance, are weighed and their volume is measured. The results are tabulated. List the substances in order of decreasing density.

	Mass	Volume
Substance I	10.0 g	10.0 mL
Substance II	10.0 kg	12.0 L
Substance III	12.0 mg	10.0 μL

- a) III > II > I
b) I > II > III
c) III > I > II
d) II > I > III
9. A solid metal sphere has a radius of 3.53 cm and a mass of 1.796 kg. What is the density of the metal in g/cm³? The volume of the sphere is $V = \frac{4}{3}\pi r^3$.
a) 34.4 g/cm³
b) 0.103 g/cm³
c) 121 g/cm³
d) 9.75 g/cm³
10. A German automobile's gas mileage is 22 km/L. Convert this quantity to miles per gallon.
a) 9.4 mi/gal
b) 1.3×10^2 mi/gal
c) 52 mi/gal
d) 3.6 mi/gal
11. A wooden block has a volume of 18.5 in³. Express the volume of the cube in cm³.
a) 303 cm³
b) 47.0 cm³
c) 1.13 cm³
d) 7.28 cm³

Answers: 1. d; 2. b; 3. c; 4. a; 5. b; 6. a; 7. c; 8. c; 9. d; 10. c; 11. a

CHAPTER SUMMARY

REVIEW



MasteringChemistry™ provides end-of-chapter exercises, feedback-enriched tutorial problems, animations, and interactive activities to encourage problem solving practice and deeper understanding of key concepts and topics.

KEY LEARNING OUTCOMES

CHAPTER OBJECTIVES	ASSESSMENT
Convert between Temperature Scales (E.2)	• Example E.1 For Practice E.1 Exercises 19–22
Report Scientific Measurements to the Correct Digit of Uncertainty (E.3)	• Example E.2 For Practice E.2 Exercises 35–38
Determine the Number of Significant Figures in a Number (E.4)	• Example E.3 For Practice E.3 Exercises 39–46
Follow Significant Figure Rules in Calculations (E.4)	• Example E.4 For Practice E.4 Exercises 47–52
Calculate the Density of a Substance (E.5)	• Example E.5 For Practice E.5 For More Practice E.5 Exercises 53–60
Use Conversion Factors to Convert Quantities from One Unit to Another (E.7, E.8)	• Examples E.6, E.7, E.8, E.9 For Practice E.6, E.7, E.8, E.9 For More Practice E.8, E.9 Exercises 61–80
Solve Problems Involving Equations (E.9)	• Examples E.10, E.11 For Practice E.10, E.11 Exercises 81, 82, 85, 86, 91, 92

KEY TERMS

Section E.1

units (4)

Section E.2

metric system (4)

English system (4)

International System of

Units (SI) (4)

meter (m) (4)

kilogram (kg) (5)

mass (5)

second (s) (5)

kelvin (K) (5)

temperature (5)

Fahrenheit (°F) scale (5)

Celsius (°C) scale (5)

Kelvin scale (5)

prefix multipliers (6)

derived unit (7)

volume (7)

liter (L) (8)

milliliter (mL) (8)

Section E.3

accuracy (9)

precision (9)

random error (10)

systematic error (10)

Section E.4

significant figures (significant

digits) (10)

exact numbers (11)

Section E.5density (d) (14)

intensive property (14)

extensive property (14)

Section E.6

energy (15)

work (15)

kinetic energy (15)

potential energy (15)

thermal energy (15)

law of conservation of energy (16)

joule (J) (16)

calorie (cal) (17)

Calorie (Cal) (17)

kilowatt-hour (kWh) (17)

exothermic (18)

endothermic (18)

Section E.7

dimensional analysis (18)

conversion factor (18)

KEY CONCEPTS

The Units of Measurement (E.2)

- Scientists use SI units, which are based on the metric system. The SI base units include the meter (m) for length, the kilogram (kg) for mass, the second (s) for time, and the kelvin (K) for temperature.
- Derived units are formed from a combination of other units. Common derived units include those for volume (cm^3 or m^3) and density (g/cm^3).

The Reliability of a Measurement and Significant Figures (E.3, E.4)

- Measurements usually involve the use of instruments, which have an inherent amount of uncertainty.
- In reported measurements, every digit is certain except the last, which is estimated. The precision of a measurement refers to its reproducibility.

- The accuracy of a measurement refers to how close a measurement is to the actual value of the quantity being measured.
- The precision of a measurement must be maintained in calculations by using established rules for significant figures.

Density (E.5)

- The density of a substance is the ratio of its mass to its volume.
- Density is an intensive property, which means it is independent of the amount of the substance.

Energy and Its Units (E.6)

- Energy is the capacity to do work and is often reported in units of joules. Systems with high potential energy tend to change in the direction of lower potential energy, releasing energy into the surroundings.

- In chemical and physical changes, matter often exchanges energy with its surroundings. In these exchanges, the total energy is always conserved; energy is neither created nor destroyed.
- A process in which a system transfers energy to the surroundings is exothermic, while a process in which a system gains energy from the surroundings is endothermic.

Converting between Units and Problem Solving (E.7, E.9)

- Dimensional analysis—solving problems by using units as a guide—is useful in solving many chemical problems.
- An approach to solving many chemical problems involves four steps: sorting the information in the problem; strategizing about how to solve the problem; solving the problem; and checking the answer.

KEY EQUATIONS AND RELATIONSHIPS

Relationship between Kelvin (K) and Celsius Temperature Scales (E.2)

$$K = ^\circ C + 273.15$$

Relationship between Celsius and Fahrenheit Temperature Scales (E.2)

$$^\circ C = \frac{(^{\circ}F - 32)}{1.8}$$

Relationship between Density (*d*), Mass (*m*), and Volume (*V*) (E.5)

$$d = \frac{m}{V}$$

EXERCISES

REVIEW QUESTIONS

1. What are the standard SI base units of length, mass, time, and temperature?
2. What are the three common temperature scales? Does the size of a degree differ among them?
3. What are prefix multipliers? List some examples.
4. What is a derived unit? List an example.
5. Explain the relationship between the reliability of a measurement and the instrument used to make the measurement.
6. What is the significance of the number of digits reported in a measured quantity?
7. Explain the difference between precision and accuracy.
8. Explain the difference between random error and systematic error.
9. When multiplying or dividing measured quantities, what determines the number of significant figures in the result?
10. When adding or subtracting measured quantities, what determines the number of significant figures in the result?
11. Explain the difference between density and mass.
12. Explain the difference between *intensive* and *extensive* properties.
13. What is energy? Explain the difference between kinetic energy and potential energy.
14. State the law of conservation of energy, and explain its significance.
15. What kind of energy is chemical energy? In what way is an elevated weight similar to a tank of gasoline?
16. Explain the difference between an exothermic and an endothermic process.
17. What is dimensional analysis?
18. How should units be treated in calculations?

PROBLEMS BY TOPIC

Note: Answers to all odd-numbered Problems, numbered in blue, can be found in Appendix III. Exercises in the Problems by Topic section are paired, with each odd-numbered problem followed by a similar even-numbered problem. Exercises in the Cumulative Problems section are also paired but more loosely. Because of their nature, Challenge Problems and Conceptual Problems are unpaired.

The Units of Measurement

19. Convert each temperature.
 - a. 32 °F to °C (temperature at which water freezes)
 - b. 77 K to °F (temperature of liquid nitrogen)
 - c. −109 °F to °C (temperature of dry ice)
 - d. 98.6 °F to K (body temperature)
20. Convert each temperature.
 - a. 212 °F to °C (temperature of boiling water at sea level)
 - b. 22 °C to K (approximate room temperature)
 - c. 0.00 K to °F (coldest temperature possible, also known as absolute zero)
 - d. 2.735 K to °C (average temperature of the universe as measured from background black body radiation)
21. The coldest temperature ever measured in the United States is −80 °F on January 23, 1971, in Prospect Creek, Alaska. Convert that temperature to °C and K. (Assume that −80 °F is accurate to two significant figures.)
22. The warmest temperature ever measured in the United States is 134 °F on July 10, 1913, in Death Valley, California. Convert that temperature to °C and K.
23. Use the prefix multipliers to express each measurement without any exponents.
 - a. 1.2×10^{-9} m
 - b. 22×10^{-15} s
 - c. 1.5×10^9 g
 - d. 3.5×10^6 L

24. Use prefix multipliers to express each measurement without any exponents.
- a. 38.8×10^5 g b. 55.2×10^{-10} s
c. 23.4×10^{-11} m d. 87.9×10^{-7} L
25. Use scientific notation to express each quantity with only the base units (no prefix multipliers).
- a. 4.5 ns b. 18 fs c. 128 pm d. $35 \mu\text{m}$
26. Use scientific notation to express each quantity with only the base units (no prefix multipliers).
- a. $35 \mu\text{L}$ b. 225 Mm
c. 133 Tg d. 1.5 cg

27. Complete the table.

a. 1245 kg	1.245×10^6 g	1.245×10^9 mg
b. 515 km	_____ dm	_____ cm
c. 122.355 s	_____ ms	_____ ks
d. 3.345 kJ	_____ J	_____ mJ

28. Complete the table.

a. 355 km/s	_____ cm/s	_____ m/ms
b. 1228 g/L	_____ g/mL	_____ kg/ML
c. 554 mK/s	_____ K/s	_____ $\mu\text{K/ms}$
d. 2.554 mg/mL	_____ g/L	_____ $\mu\text{g/mL}$

29. Express the quantity 254,998 m in each unit.
- a. km b. Mm c. mm d. cm
30. Express the quantity 556.2×10^{-12} s in each unit.
- a. ms b. ns c. ps d. fs
31. How many 1-cm squares does it take to construct a square that is 1 m on each side?
32. How many 1-cm cubes does it take to construct a cube that is 4 cm on edge?
33. Convert 15.0 L to each unit.
- a. mL b. cm^3 c. gal d. qt
34. Convert $4.58 \times 10^3 \text{ cm}^3$ to each unit.
- a. L b. mL c. gal d. qt
- The *m* in the equation for density is in italic type, meaning that it stands for mass rather than for meters. In general, the symbols for units such as meters (m), seconds (s), or kelvins (K) appear in regular type, while those for variables such as mass (*m*), volume (*V*), and time (*t*) appear in italics.

The Reliability of a Measurement and Significant Figures

35. A ruler used to measure a penny has markings every 1 mm. Which measurement for the size of the penny is correctly reported for this ruler?
- a. 19.05 mm b. 19 mm c. 19.1 mm
36. A scale used to weigh produce at a market has markings every 0.1 kg. Which measurement for the mass of a dozen apples is correctly reported for this scale?
- a. 1.87 kg b. 1.9 kg c. 1.875 kg


37. Read each measurement to the correct number of significant figures. Laboratory glassware should always be read from the bottom of the meniscus.



a.



b.



c.

38. Read each measurement to the correct number of significant figures. Laboratory glassware should always be read from the bottom of the meniscus. Digital balances normally display mass to the correct number of significant figures for that particular balance.



a.



b.



c.

39. For each number, underline the zeroes that are significant and draw an x through the zeroes that are not.
- a. 1,050,501 km b. 0.0020 m
c. 0.000000000000002 s d. 0.001090 cm
40. For each number, underline the zeroes that are significant and draw an x through the zeroes that are not.
- a. 180,701 mi b. 0.001040 m
c. 0.005710 km d. 90,201 m
41. How many significant figures are in each number?
- a. 0.000312 m
b. 312,000 s
c. 3.12×10^5 km
d. 13,127 s
e. 2000
42. How many significant figures are in each number?
- a. 0.1111 s
b. 0.007 m
c. 108,700 km
d. 1.563300×10^{11} m
e. 30,800
43. Which numbers are exact (and therefore have an unlimited number of significant figures)?
- a. $\pi = 3.14$
b. 12 inches = 1 foot
c. EPA gas mileage rating of 26 miles per gallon
d. 1 gross = 144

44. Indicate the number of significant figures in each number. If the number is an exact number, indicate that it has an unlimited number of significant figures.
- 305,435,087 (2008 U.S. population)
 - $2.54 \text{ cm} = 1 \text{ in}$
 - 11.4 g/cm^3 (density of lead)
 - $12 = 1 \text{ dozen}$
45. Round each number to four significant figures.
- 156.852
 - 156.842
 - 156.849
 - 156.899
46. Round each number to three significant figures.
- 79,845.82
 - 1.548937×10^7
 - 2.3499999995
 - 0.000045389
47. Calculate to the correct number of significant figures.
- $9.15 \div 4.970$
 - $1.54 \times 0.03060 \times 0.69$
 - $27.5 \times 1.82 \div 100.04$
 - $(2.290 \times 10^6) \div (6.7 \times 10^4)$
48. Calculate to the correct number of significant figures.
- $89.3 \times 77.0 \times 0.08$
 - $(5.01 \times 10^5) \div (7.8 \times 10^2)$
 - $4.005 \times 74 \times 0.007$
 - $453 \div 2.031$
49. Calculate to the correct number of significant figures.
- $43.7 - 2.341$
 - $17.6 + 2.838 + 2.3 + 110.77$
 - $19.6 + 58.33 - 4.974$
 - $5.99 - 5.572$
50. Calculate to the correct number of significant figures.
- $0.004 + 0.09879$
 - $1239.3 + 9.73 + 3.42$
 - $2.4 - 1.777$
 - $532 + 7.3 - 48.523$
51. Calculate to the correct number of significant figures.
- $(24.6681 \times 2.38) + 332.58$
 - $(85.3 - 21.489) \div 0.0059$
 - $(512 \div 986.7) + 5.44$
 - $[(28.7 \times 10^5) \div 48.533] + 144.99$
52. Calculate to the correct number of significant figures.
- $[(1.7 \times 10^6) \div (2.63 \times 10^5)] + 7.33$
 - $(568.99 - 232.1) \div 5.3$
 - $(9443 + 45 - 9.9) \times 8.1 \times 10^6$
 - $(3.14 \times 2.4367) - 2.34$

Density

53. A new penny has a mass of 2.49 g and a volume of 0.349 cm^3 . Is the penny made of pure copper? Explain.
54. A titanium bicycle frame displaces 0.314 L of water and has a mass of 1.41 kg. What is the density of the titanium in g/cm^3 ?
55. Glycerol is a syrupy liquid used in cosmetics and soaps. A 3.25-L sample of pure glycerol has a mass of $4.10 \times 10^3 \text{ g}$. What is the density of glycerol in g/cm^3 ?
56. An allegedly gold nugget is tested to determine its density. It is found to displace 19.3 mL of water and has a mass of 371 g. Could the nugget be made of gold?
57. Ethylene glycol (antifreeze) has a density of 1.11 g/cm^3 .
- What is the mass in g of 417 mL of this liquid?
 - What is the volume in L of 4.1 kg of this liquid?
58. Acetone (nail polish remover) has a density of 0.7857 g/cm^3 .
- What is the mass, in g, of 28.56 mL of acetone?
 - What is the volume, in mL, of 6.54 g of acetone?
59. A small airplane takes on 245 L of fuel. If the density of the fuel is 0.821 g/mL , what mass of fuel has the airplane taken on?
60. Human fat has a density of 0.918 g/cm^3 . How much volume (in cm^3) is gained by a person who gains 10.0 lb of pure fat?

Unit Conversions

61. Perform each unit conversion.
- 27.8 L to cm^3
 - 1898 mg to kg
 - 198 km to cm
62. Perform each unit conversion.
- 28.9 nm to μm
 - 1432 cm^3 to L
 - 1211 Tm to Gm
63. Perform each unit conversion.
- 154 cm to in
 - 3.14 kg to g
 - 3.5 L to qt
 - 109 mm to in
64. Perform each unit conversion.
- 1.4 in to mm
 - 116 ft to cm
 - 1845 kg to lb
 - 815 yd to km
65. A runner wants to run 10.0 km. She knows that her running pace is 7.5 miles per hour. How many minutes must she run?
66. A cyclist rides at an average speed of 18 miles per hour. If she wants to bike 212 km, how long (in hours) must she ride?
67. A European automobile has a gas mileage of 17 km/L. What is the car's gas mileage in miles per gallon?
68. A gas can holds 5.0 gallons of gasoline. Express this quantity in cm^3 .
69. A house has an area of 195 m^2 . What is its area in:
- km^2
 - dm^2
 - cm^2

70. A bedroom has a volume of 115 m^3 . What is its volume in:
a. km^3 b. dm^3 c. cm^3
71. The average U.S. farm occupies 435 acres. How many square miles is this? ($1 \text{ acre} = 43,560 \text{ ft}^2$, $1 \text{ mile} = 5280 \text{ ft}$)
72. Total U.S. farmland occupies 954 million acres. How many square miles is this? ($1 \text{ acre} = 43,560 \text{ ft}^2$, $1 \text{ mile} = 5280 \text{ ft}$). Total U.S. land area is 3.537 million square miles. What percentage of U.S. land is farmland?
73. An acetaminophen suspension for infants contains $80 \text{ mg}/0.80 \text{ mL}$ suspension. The recommended dose is $15 \text{ mg}/\text{kg}$ body weight. How many mL of this suspension should be given to an infant weighing 14 lb? (Assume two significant figures.)
74. An ibuprofen suspension for infants contains $100 \text{ mg}/5.0 \text{ mL}$ suspension. The recommended dose is $10 \text{ mg}/\text{kg}$ body weight. How many mL of this suspension should be given to an infant weighing 18 lb? (Assume two significant figures.)
75. Convert between energy units.
a. 534 kWh to J b. 215 kJ to Cal
c. 567 Cal to J d. $2.85 \times 10^3 \text{ J}$ to cal
76. Convert between energy units.
a. 231 cal to kJ
b. $132 \times 10^4 \text{ kJ}$ to kcal
c. $4.99 \times 10^3 \text{ kJ}$ to kWh
d. $2.88 \times 10^4 \text{ J}$ to Cal
77. Suppose that a person eats 2387 Calories per day. Convert this amount of energy into each unit.
a. J b. kJ c. kWh
78. A particular frost-free refrigerator uses about 745 kWh of electrical energy per year. Express this amount of energy in each unit.
a. J b. kJ c. Cal
79. A household receives a \$145 electricity bill. The cost of electricity is $\$0.120/\text{kWh}$. How much energy, in joules, did the household use?
80. A 150-lb person burns about 2700 Calories to run a marathon. How much energy is burned in kJ? Assume two significant figures.


CUMULATIVE PROBLEMS

81. A solid gold cylinder sits on a weight-sensitive alarm. A thief uses a can of sand to replace the solid gold cylinder. The can of sand and the gold cylinder have exactly the same dimensions (length = 22 cm and radius = 3.8 cm).
a. Calculate the mass of the gold cylinder and can of sand (ignore the mass of the can itself).
(density of gold = $19.3 \text{ g}/\text{cm}^3$, density of sand = $3.00 \text{ g}/\text{cm}^3$)
b. Did the thief set off the alarm? Explain.
82. The proton has a radius of approximately $1.0 \times 10^{-13} \text{ cm}$ and a mass of $1.7 \times 10^{-24} \text{ g}$. Determine the density of a proton. For a sphere $V = (4/3)\pi r^3$.
83. The density of titanium is $4.51 \text{ g}/\text{cm}^3$. What is the volume (in cubic inches) of 3.5 lb of titanium?
84. The density of iron is $7.86 \text{ g}/\text{cm}^3$. What is its density in pounds per cubic inch (lb/in^3)?
85. A steel cylinder has a length of 2.16 in, a radius of 0.22 in, and a mass of 41 g. What is the density of the steel in g/cm^3 ?
86. A solid aluminum sphere has a mass of 85 g. Use the density of aluminum to find the radius of the sphere in inches.
87. A backyard swimming pool holds 185 cu yd (yd^3) of water. What is the mass of the water in pounds?
88. An iceberg has a volume of 7655 cu ft. What is the mass of the ice (in kg) composing the iceberg (at 0°C)?
89. The Toyota Prius, a hybrid electric vehicle, has a U.S. Environmental Protection Agency (EPA) gas mileage rating of 52 mi/gal in the city. How many kilometers can the Prius travel on 15 L of gasoline?
90. The Honda Insight, a hybrid electric vehicle, has a U.S. Environmental Protection Agency (EPA) gas mileage rating of 57 mi/gal in the city. How many kilometers can the Insight travel on the amount of gasoline that would fit in a soda can? The volume of a soda can is 355 mL.
91. The single proton that forms the nucleus of the hydrogen atom has a radius of approximately $1.0 \times 10^{-13} \text{ cm}$. The hydrogen atom itself has a radius of approximately 52.9 pm. What fraction of the space within the atom is occupied by the nucleus? (Hint: Start by calculating the volume of the nucleus and the volume of the atom.)
92. A sample of gaseous neon atoms at atmospheric pressure and 0°C contains 2.69×10^{22} atoms per liter. The atomic radius of neon is 69 pm. What fraction of the space is occupied by the atoms themselves? What does this reveal about the separation between atoms in the gaseous phase? (Hint: Start by calculating the volume occupied by one atom and then multiply that by the number of atoms in 1 liter to get the volume occupied by the atoms themselves.)
93. The diameter of a hydrogen atom is 212 pm. Find the length in kilometers of a row of 6.02×10^{23} hydrogen atoms. The diameter of a ping pong ball is 4.0 cm. Find the length in kilometers of a row of 6.02×10^{23} ping pong balls.
94. The world's record in the 100-m dash is 9.58 s, and in the 100-yd dash it is 9.07 s. Find the speed in mi/hr of the runners who set these records.
95. Table salt contains 39.33 g of sodium per 100 g of salt. The U.S. Food and Drug Administration (FDA) recommends that adults consume less than 2.40 g of sodium per day. A particular snack mix contains 1.25 g of salt per 100 g of the mix. What mass of the snack mix can an adult consume and not exceed the FDA limit?
96. Lead metal can be extracted from a mineral called galena, which contains 86.6% lead by mass. A particular ore contains 68.5% galena by mass. If the lead can be extracted with 92.5% efficiency, what mass of ore is required to make a lead sphere with a 5.00-cm radius?
97. A length of #8 copper wire (radius = 1.63 mm) has a mass of 24.0 kg and a resistance of 2.061 ohm per km (Ω/km). What is the overall resistance of the wire? (Hint: Begin by using the mass and the density of copper to determine the volume of the wire and then use $V = \pi \cdot r^2 \cdot l$ to determine the length of the wire.)

98. Rolls of aluminum foil are 304 mm wide and 0.016 mm thick. What maximum length of aluminum foil can be made from 1.10 kg of aluminum?
99. Liquid nitrogen has a density of 0.808 g/mL and boils at 77 K. Researchers often purchase liquid nitrogen in insulated 175-L tanks. The liquid vaporizes quickly to gaseous nitrogen (which has a density of 1.15 g/L at room temperature and atmospheric pressure) when the liquid is removed from the tank. Suppose that all 175 L of liquid nitrogen in a tank accidentally vaporized in a lab that measured $10.00\text{ m} \times 10.00\text{ m} \times 2.50\text{ m}$. What maximum fraction of the air in the room could be displaced by the gaseous nitrogen?
100. Mercury is often used in thermometers. The mercury sits in a bulb on the bottom of the thermometer and rises up a thin capillary as the temperature rises. Suppose a mercury thermometer contains 3.380 g of mercury and has a capillary that is 0.200 mm in diameter. How far does the mercury rise in the capillary when the temperature changes from 0.0°C to 25.0°C ? The density of mercury at these temperatures is 13.596 g/cm^3 and 13.534 g/cm^3 , respectively.
101. Carbon-12 contains 6 protons and 6 neutrons. The radius of the nucleus is approximately 2.7 fm (femtometers), and the radius of the atom is approximately 70 pm (picometers). Calculate the volume of the nucleus and the volume of the atom. What percentage of the carbon atom's volume is occupied by the nucleus? (Assume two significant figures.)

CHALLENGE PROBLEMS


102. In 1999, scientists discovered a new class of black holes with masses 100 to 10,000 times the mass of our sun that occupy less space than our moon. Suppose that one of these black holes has a mass of 1×10^3 suns and a radius equal to one-half the radius of our moon. What is the density of the black hole in g/cm^3 ? The radius of our sun is $7.0 \times 10^5\text{ km}$, and it has an average density of $1.4 \times 10^3\text{ kg/m}^3$. The diameter of the moon is 2.16×10^3 miles.




103. Polluted air can have carbon monoxide (CO) levels of 15.0 ppm. An average human inhales about 0.50 L of air per breath and takes about 20 breaths per minute. How many milligrams of carbon monoxide does the average person inhale in an 8-hour period in this level of carbon monoxide pollution? Assume that the carbon monoxide has a density of 1.2 g/L. (Hint: 15.0 ppm CO means 15.0 L CO per 10^6 L air.)
104. Nanotechnology, the field of building ultrasmall structures one atom at a time, has progressed in recent years. One potential application of nanotechnology is the construction of artificial cells. The simplest cells would probably mimic red blood cells, the body's oxygen transporters. Nanocontainers, perhaps constructed of carbon, could be pumped full of oxygen and injected into a person's bloodstream. If the person needed additional oxygen—due to a heart attack or for the purpose of space travel, for example—these containers could slowly release oxygen into the blood, allowing tissues that would otherwise die to remain alive. Suppose that the nanocontainers were cubic and had an edge length of 25 nanometers.
- What is the volume of one nanocontainer? (Ignore the thickness of the nanocontainer's wall.)
 - Suppose that each nanocontainer could contain pure oxygen pressurized to a density of 85 g/L. How many grams of oxygen could be contained by each nanocontainer?
 - Air typically contains about 0.28 g of oxygen per liter. An average human inhales about 0.50 L of air per breath and takes about 20 breaths per minute. How many grams of oxygen does a human inhale per hour? (Assume two significant figures.)
 - What is the minimum number of nanocontainers that a person would need in his bloodstream to provide 1 hour's worth of oxygen?
 - What is the minimum volume occupied by the number of nanocontainers calculated in part d? Is such a volume feasible, given that total blood volume in an adult is about 5 L?
105. Determine the approximate percent increase in waist size that occurs when a 155-lb person gains 40.0 lb of fat. Assume that the volume of the person can be modeled by a cylinder that is 4.0 ft tall. The average density of a human is about 1.0 g/cm^3 , and the density of fat is 0.918 g/cm^3 .
106. A box contains a mixture of small copper spheres and small lead spheres. The total volume of both metals is measured by the displacement of water to be 427 cm^3 , and the total mass is 4.36 kg. What percentage of the spheres is copper?

CONCEPTUAL PROBLEMS

107. A cube has an edge length of 7 cm. If it is divided up into 1-cm cubes, how many 1-cm cubes are there?
108. Substance A has a density of 1.7 g/cm^3 . Substance B has a density of 1.7 kg/m^3 . Without doing any calculations, determine which substance is more dense.
109. For each box, examine the blocks attached to the balances. Based on their positions and sizes, determine which block is more dense (the dark block or the lighter-colored block), or if the relative densities cannot be determined. (Think carefully about the information being shown.)



a.



b.



c.

QUESTIONS FOR GROUP WORK

Active Classroom Learning

Discuss these questions with the group and record your consensus answer.

110. Look up the measurement of the approximate thickness of a human hair.
- Convert the measurement to an SI unit (if it isn't already).
 - Write it in scientific notation.
 - Write it without scientific notation.
 - Write it with an appropriate prefix on a base unit.
- Now repeat these steps using the distance from Earth to the sun.
111. The following statements are all true.
- Jessica's house is 5 km from the grocery store.
 - Jessica's house is 4.73 km from the grocery store.
 - Jessica's house is 4.73297 km from the grocery store.

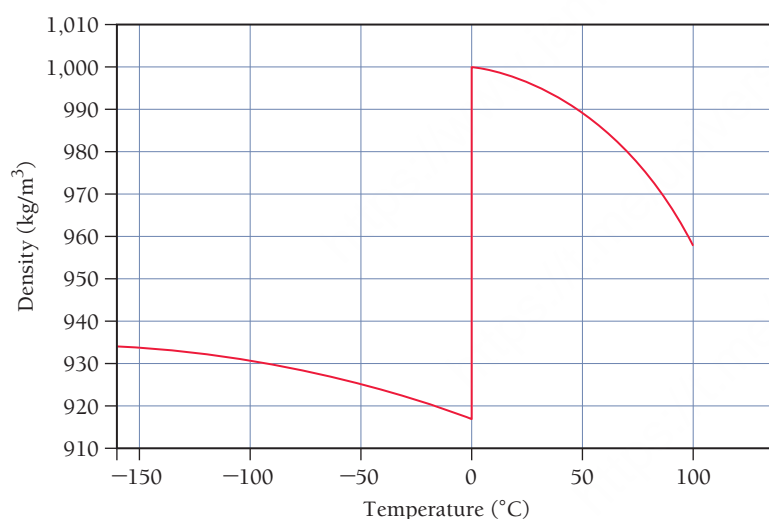
How can they all be true? What does the number of digits in each statement communicate? What sort of device would Jessica need to make the measurement in each statement?

112. One inch is equal to 2.54 cm. Draw a line that is 1 inch long, and mark the centimeters on the line. Draw a cube that is 1 inch on each side. Draw lines on each face of the cube that are 1 centimeter apart. How many cubic centimeters are there in 1 cubic inch?
113. Convert the height of each member in your group from feet and inches to meters. Once you have the heights in meters, calculate the sum of all the heights. Use appropriate rules for significant figures at each step.

DATA INTERPRETATION AND ANALYSIS

114. The density of a substance can change with temperature. The graph displays the density of water from $-150\text{ }^{\circ}\text{C}$ to $100\text{ }^{\circ}\text{C}$. Examine the graph and answer the questions.

The Density of Water as a Function of Temperature



- a. Water undergoes a large change in density at $0\text{ }^{\circ}\text{C}$ as it freezes to form ice. Calculate the percent change in density that occurs when liquid water freezes to ice at $0\text{ }^{\circ}\text{C}$.

$$(\text{Hint: } \% \text{ change} = \frac{\text{final value} - \text{initial value}}{\text{initial value}} \times 100\%)$$

- b. Calculate the volume (in cm^3) of 54 g of water at $1\text{ }^{\circ}\text{C}$ and the volume of the same mass of ice at $-1\text{ }^{\circ}\text{C}$. What is the change in volume?
- c. Antarctica contains 26.5 million cubic kilometers of ice. Assume the temperature of the ice is $-20\text{ }^{\circ}\text{C}$. If all of this ice were heated to $1\text{ }^{\circ}\text{C}$ and melted to form water, what volume of liquid water would form?
- d. A 1.00-L sample of water is heated from $1\text{ }^{\circ}\text{C}$ to $100\text{ }^{\circ}\text{C}$. What is the volume of the water after it is heated?

ANSWERS TO CONCEPTUAL CONNECTIONS

- Cc E.1 The prefix multiplier micro (10^{-6}) is appropriate. The measurement using this multiplier is $55.7\text{ }\mu\text{m}$.
- Cc E.2 (c) The sample expands. However, because its mass remains constant while its volume increases, its density decreases.
- Cc E.3 Since burning natural gas gives off energy to the surroundings, the process is exothermic and the energy change is negative.

- Cc E.4 (b) When we multiply a value in

$$\text{pound} \cdot \text{second by } \frac{4.45 \text{ newton} \cdot \text{second}}{1 \text{ pound} \cdot \text{second}}, \text{ the}$$

pound \cdot second cancels and we get newton \cdot second.

- 1.1** A Particulate View of the World: Structure Determines Properties 35
- 1.2** Classifying Matter: A Particulate View 37
- 1.3** The Scientific Approach to Knowledge 39
- 1.4** Early Ideas about the Building Blocks of Matter 41
- 1.5** Modern Atomic Theory and the Laws That Led to It 41
- 1.6** The Discovery of the Electron 45

- 1.7** The Structure of the Atom 48
- 1.8** Subatomic Particles: Protons, Neutrons, and Electrons 50
- 1.9** Atomic Mass: The Average Mass of an Element's Atoms 54
- 1.10** Atoms and the Mole: How Many Particles? 57
- 1.11** The Origins of Atoms and Elements 62
- Key Learning Outcomes** 63



This image portrays the Disneyland ride, *Adventure Thru Inner Space*. The premise of the ride is that you enter a microscope and get shrunk down to the size of an atom. The red and white spheres shown here depict oxygen and hydrogen atoms bound together to form water molecules.

CHAPTER

1

Atoms

WHAT DO YOU THINK IS THE MOST powerful idea in all of human knowledge?

There are, of course, many possible answers to this question—some practical, some philosophical, and some scientific. If we limit ourselves only to scientific answers, mine would be this: *The properties of matter are determined by the structure of the atoms and molecules that compose it.* Atoms and molecules determine how matter behaves—if they were different, matter would be different. The structure of helium atoms determines how helium behaves; the structure of water molecules determines how water behaves; and the structures of the molecules that compose our bodies determine how our bodies behave. The understanding of matter at the particulate level gives us unprecedented control over that matter. For example, our understanding of the details of the molecules that compose living organisms has revolutionized biology over the last 50 years.

“The first principles of the universe are atoms and empty space; everything else is merely thought to exist.”

—Democritus (c. 460 BC–c. 370 BC)

1.1 A Particulate View of the World: Structure Determines Properties

As I sat in the “omnimover” and listened to the narrator’s voice telling me that I was shrinking down to the size of an atom, I grew apprehensive but curious. Just minutes before, while waiting in line, I witnessed what appeared to be full-sized humans entering a microscope and emerging from the other end many times smaller. I was 7 years old and I was about to ride *Adventure Thru Inner Space*, a Disneyland ride (in Tomorrowland) that simulated the process of shrinking down to the size of an atom. The ride began with darkness and shaking, but then the shaking stopped and giant snowflakes appeared. The narrator explained that we were in the process of shrinking to an ever-smaller size (which explains why the snowflakes grew larger and larger). Soon, we entered the wall of the snowflake itself and began to see



KEY CONCEPT VIDEO
Structure Determines Properties

The eText 2.0 icon indicates that this feature is embedded and interactive in the eText.

water molecules all around us. These also grew larger as we continued our journey into inner space and eventually ended up within the atom itself. Although this Disneyland ride bordered on being corny and although it has since been shut down, it became my favorite ride as a young child.

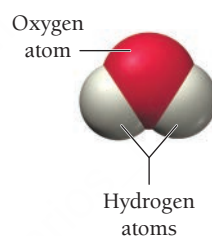
That ride sparked my interest in the world of atoms and molecules, an interest that has continued and grown to this day. I am a chemist because I am obsessed with the connection between the “stuff” around us and the particles that compose that stuff, which is the core of chemistry and the main idea of this book. We can express this core idea more precisely in two brief statements:

1. Matter is particulate—it is composed of particles.
2. The structure of those particles determines the properties of matter.

Matter is anything that occupies space and has mass. Most things you can think of—such as this book, your desk, and even your body—are composed of matter. The particulate nature of matter—first conceived in ancient Greece but widely accepted only about 200 years ago—is the foundation of chemistry and the premise of this book.

As an example of this premise, consider water, the familiar substance we all know and depend on for life. The particles that compose water are *water molecules*, which we can represent like this:

Water molecule



A water molecule is composed of three *atoms*: one oxygen atom and two hydrogen atoms. **Atoms** are the basic particles that compose ordinary matter, and about 91 different types of atoms naturally exist. Atoms often bind together in specific geometrical arrangements to form **molecules**, as we see in water.

The first thing you should know about water molecules—and all molecules—is that they are extremely small, much too small to see with even the strongest optical microscope. The period at the end of this sentence has a diameter of about one-fifth of a millimeter (less than one-hundredth of an inch); yet a spherical drop of water with the same diameter as this period contains over 100 million billion water molecules.

The second thing you should know about water molecules is that their structure determines the properties of water. The water molecule is *bent*: The two hydrogen atoms and the oxygen atom are not in a straight line. If the atoms were in a straight line, water itself would be different. For example, suppose that the water molecule were linear instead of bent:

Hypothetical linear water molecule



If water had this hypothetical structure, it would be a different substance. First of all, linear water would have a lower boiling point than normal water (and may even be a gas at room temperature). Just this change in shape would cause the attractive forces between water molecules to weaken so that the molecules would have less of a tendency to clump together as a liquid and more of a tendency to evaporate into a gas. In its liquid form, linear water would be quite different than the water we know. It would feel more like gasoline or paint thinner than water. Substances that normally dissolve easily in water—such as sugar or salt—would probably not dissolve in linear water.

The key point here is that the properties of the substances around us radically depend on the structure of the particles that compose them—a small change in structure, such as a different shape, results in a significant change in properties. If we want to understand the substances around us, we must understand the particles that compose them—and that is the central goal of chemistry. A good, simple definition of **chemistry** is:

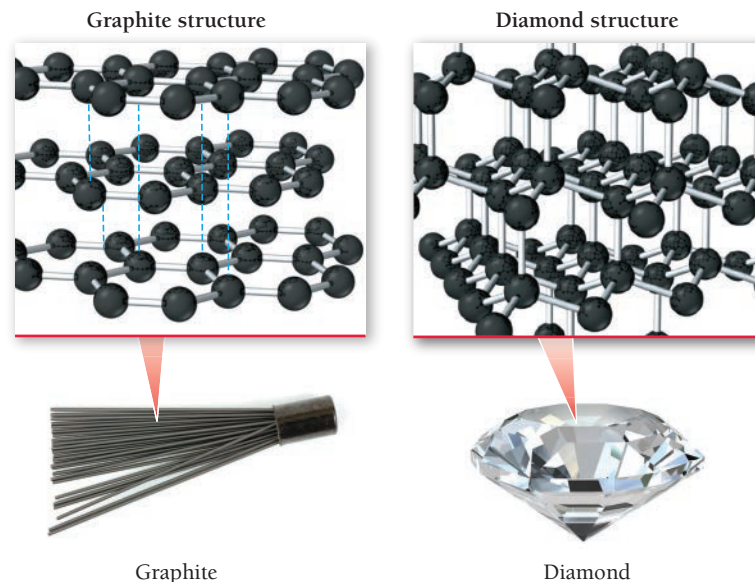
Chemistry—the science that seeks to understand the properties of matter by studying the structure of the particles that compose it.

In chemistry, atoms are often portrayed as colored spheres, with each color representing a different kind of atom. For example, a black sphere represents a carbon atom, a red sphere represents an oxygen atom, and a white sphere represents a hydrogen atom. For a complete color code of atoms, see Appendix IIA.

Atoms themselves, as we discuss later in this chapter, are composed of even smaller particles.

Throughout this book, we explore the connection between the properties of matter and the particles that compose it. We seek to understand how differences on the particulate level affect the properties on the macroscopic level. Before we move on, let's examine one more example that demonstrates this principle. Consider the structures of graphite and diamond.

Graphite is the slippery black substance (often called pencil lead) that you have probably used in a mechanical pencil. Diamond is the brilliant gemstone found in jewelry. Graphite and diamond are both composed of exactly the same atoms—carbon atoms. The striking differences between the substances are a result of how those atoms are arranged. In graphite, the atoms are arranged in sheets. The atoms within each sheet are tightly bound to each other, but the sheets are *not* tightly bound to other sheets. Therefore, the sheets can slide past each other, which is why the graphite in a pencil leaves a trail as you write. In diamond, by contrast, the carbon atoms are all bound together in a three-dimensional structure where layers are strongly bound to other layers, resulting in the strong, nearly unbreakable substance. Such is the particulate world—small differences in the arrangements of the particles that compose matter can result in large differences in the properties of that matter.



1.2 Classifying Matter: A Particulate View

In the previous section, we saw that matter is anything that occupies space and has mass. A specific instance of matter—such as air, water, or sand—is a **substance**. We can begin to understand the particulate view of matter by classifying matter based on the particles that compose it. The first classification—the **state** of matter—depends on the *relative positions* of the particles and *how strongly they interact* with one another (relative to temperature). The second classification—the **composition** of matter—depends on the *types* of particles.

PEARSON
eText
2.0

KEY CONCEPT VIDEO
Classifying Matter

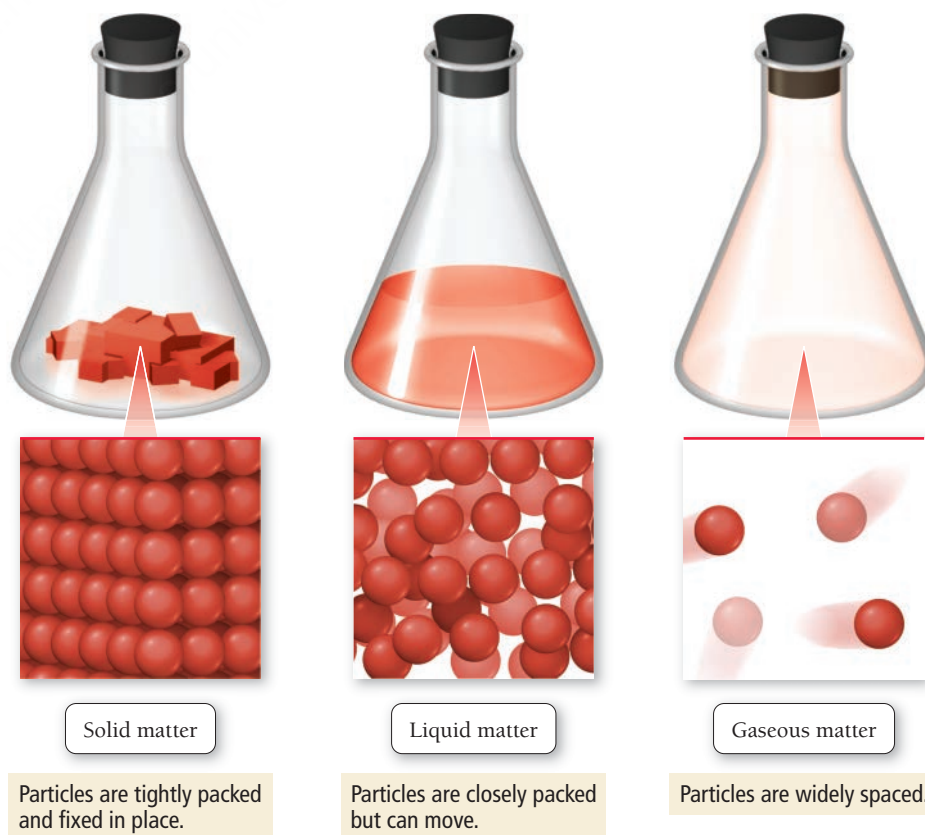
The state of matter changes from solid to liquid to gas with increasing temperature.

The States of Matter: Solid, Liquid, and Gas

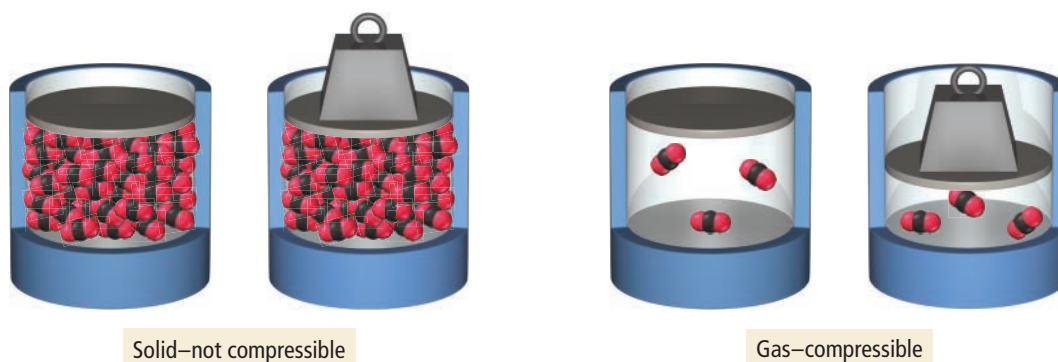
Matter can exist in three different states: **solid**, **liquid**, and **gas** (Figure 1.1 ►). The particles that compose *solid matter* attract one another strongly and therefore pack closely to each other in fixed locations. Although the particles vibrate, they do not move around or past each other. Consequently, a solid has a fixed volume and rigid shape. Ice, aluminum, and diamond are good examples of solids.

The particles that compose *liquid matter* pack about as closely as particles do in solid matter, but slightly weaker attractions between the particles allow them to move relative to each other, giving liquids a fixed volume but not a fixed shape. Liquids assume the shape of their container. Water, alcohol, and gasoline are examples of substances that are liquids at room temperature.

► **FIGURE 1.1 The States of Matter** In a solid, the composite particles are fixed in place and can only vibrate. In a liquid, although the particles are closely packed, they can move past one another, allowing the liquid to flow and assume the shape of its container. In a gas, the particles are widely spaced, making gases compressible as well as fluid (able to flow).



► **FIGURE 1.2 The Compressibility of Gases** Gases can be compressed—squeezed into a smaller volume—because there is so much empty space between atoms or molecules in the gaseous state.

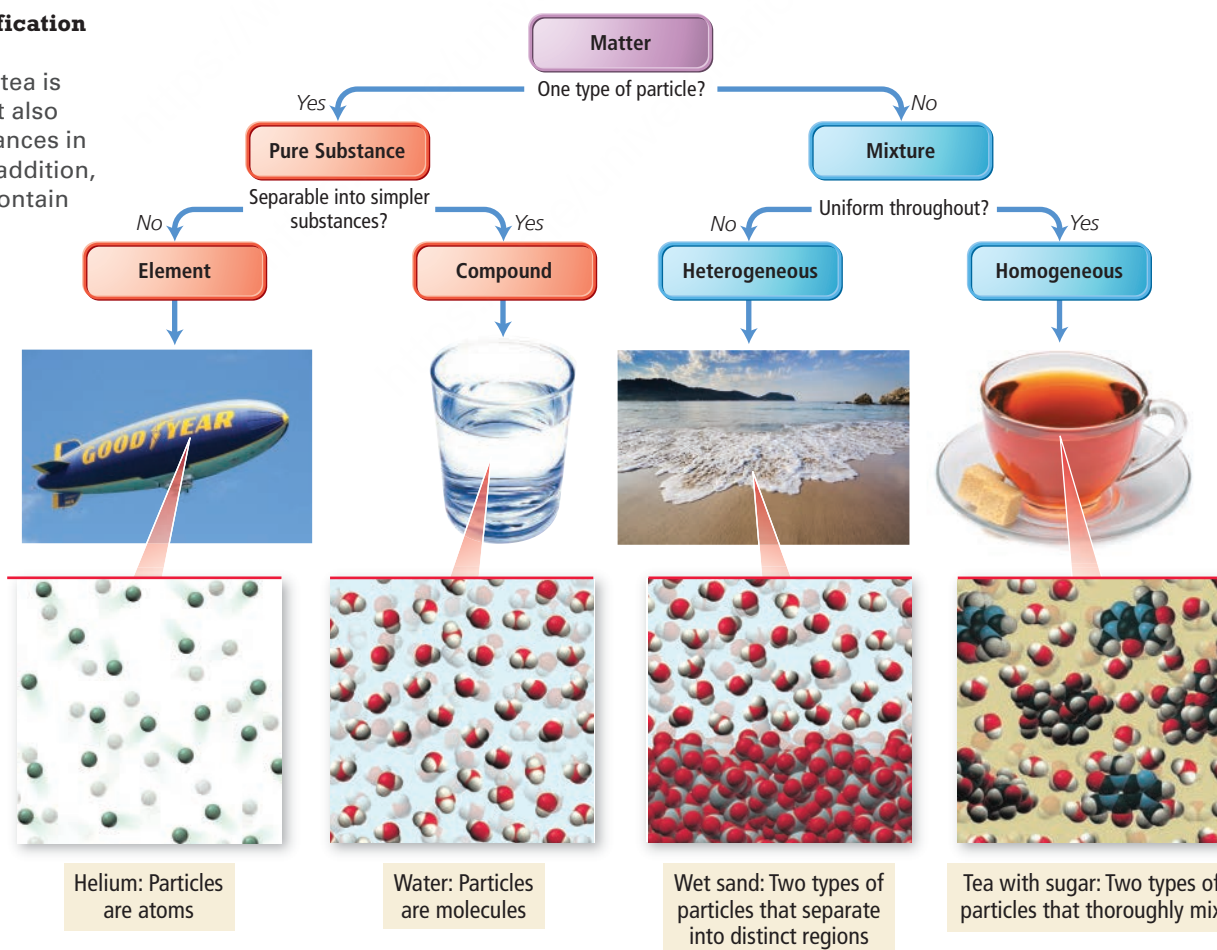


The particles that compose *gaseous matter* attract each other only very weakly—so weakly that they do not clump together as particles do in a liquid or solid. Instead the particles are free to move large distances before colliding with one another. The large spaces between the particles make gases *compressible* (**Figure 1.2 ▲**). When you squeeze a balloon or sit down on an air mattress, you force the gas particles into a smaller space, so that they are closer together. Gases always assume the shape *and* volume of their container. Substances that are gases at room temperature include helium, nitrogen (the main component of air), and carbon dioxide.

Elements, Compounds, and Mixtures

In addition to classifying matter according to its *state*, we can classify it according to *the types of particles that compose it* (its composition), as shown in **Figure 1.3 ▼**. In other words, in our quest to understand the particulate nature of matter, we must determine the *types of particles* in the matter and *whether there is only one type or more than one type*. The first division in this scheme is between a *pure substance* and a *mixture*.

► **FIGURE 1.3 The Classification of Matter According to Its Composition** Sweetened tea is mostly sugar and water but also contains a few other substances in much smaller amounts. In addition, the tea is assumed to not contain any solid impurities.



A **pure substance** is made up of only one type of particle (one component), and its composition is invariant (it does not vary from one sample to another). The particles that compose a pure substance can be individual atoms, or groups of atoms joined together. For example, helium, water, and table salt (sodium chloride) are all pure substances. Each of these substances is made up of only one type of particle: Helium is made up of helium atoms; water is made up of water molecules; and sodium chloride is made up of sodium chloride units. The composition of a pure sample of any one of these substances is always exactly the same.

A **mixture**, by contrast, is a substance composed of two or more particles in proportions that can vary from one sample to another. For example, sweetened tea, composed primarily of water molecules and sugar molecules (with a few other substances mixed in), is a mixture. It can be slightly sweet (a small proportion of sugar to water) or very sweet (a large proportion of sugar to water) or any level of sweetness in between.

A pure substance can be either an *element* or a *compound*, depending on whether or not it can be broken down (or decomposed) into simpler substances. Helium, which we just noted is a pure substance, is also a good example of an **element**, a substance that cannot be chemically broken down into simpler substances. Water, also a pure substance, is a good example of a **compound**, a substance composed of two or more elements (in this case hydrogen and oxygen) in fixed, definite proportions. On Earth, compounds are more common than pure elements because most elements combine with other elements to form compounds.

A mixture can be either heterogeneous or homogeneous, depending on how *uniformly* the particles that compose the mixture combine. Water and sand is a **heterogeneous mixture**, one in which the composition varies from one region of the mixture to another—the different particles that compose water and sand *do not* mix uniformly. Sweetened tea is a **homogeneous mixture**, one with the same composition throughout—the particles that compose sweetened tea mix uniformly.

Classifying a substance according to its composition is not always obvious and requires that you either know the true composition of the substance or are able to test it in a laboratory. For now, we will focus on relatively common substances that you are likely to have encountered. During this course, you will gain the knowledge to understand the composition of a larger variety of substances.

The eText 2.0 icon indicates that this feature is embedded and interactive in the eText.

Pure Substances and Mixtures

Using a small circle to represent each atom of one type of element and a small square to represent each atom of a second type of element, make a drawing of: (a) a pure substance (a compound) composed of the two elements (in a one-to-one ratio); (b) a homogeneous mixture composed of the two elements; and (c) a heterogeneous mixture composed of the two elements.

Note: Answers to Conceptual Connections can be found at the end of each chapter.

1.1
Cc

Conceptual
Connection



1.3 The Scientific Approach to Knowledge

The particulate model of matter introduced in Section 1.1 is not obvious to a casual observer of matter. In fact, early influential thinkers rejected it. Nonetheless, it came to be accepted because *scientists were driven to it by the data*. When thinkers applied the *scientific approach to knowledge* to understanding matter, the only explanation consistent with their observations was that matter is particulate.

The scientific approach to knowledge is a fairly recent phenomenon, only finding broad acceptance in the last 400 years or so. Greek thinkers (over 2000 years ago) were heavily influenced by the Greek philosopher Plato (427–347 B.C.E.), who thought that the best way to learn about reality was not through the senses but through reason. Plato believed that the physical world was an imperfect representation of a perfect and transcendent world (a world beyond space and time). For him, true knowledge came, not through observing the real physical world, but through reasoning and thinking about the ideal one.

The *scientific* approach to knowledge is exactly the opposite of Plato's approach. Scientific knowledge is empirical—it is based on *observation* and *experiment*. Scientists observe and perform experiments on the physical world to learn about it. Some observations and experiments are qualitative (noting or describing how a process happens), but many are quantitative (measuring or quantifying something about the process). For example, Antoine Lavoisier (1743–1794), a French chemist who studied combustion (burning), made careful measurements of the mass of objects before and after burning them in closed containers. He noticed that there was no change in the total mass of material within the container after combustion. In doing so, Lavoisier made an important *observation* about the physical world.

Although some Greek philosophers, such as Aristotle (384–322 B.C.E.), did use observation to attain knowledge, they did not emphasize experiment and measurement to the extent that modern science does.



▲ A painting of the French chemist Antoine Lavoisier with his wife, Marie, who helped him in his work by illustrating his experiments and translating scientific articles from English. Lavoisier, who also made significant contributions to agriculture, industry, education, and government administration, was executed during the French Revolution. (The Metropolitan Museum of Art)

In Dalton's time, people thought atoms were indestructible. Today, because of nuclear reactions, we know that atoms can be broken apart into their smaller components.

Observations often lead a scientist to formulate a **hypothesis**, a tentative interpretation or explanation of the observations. For example, Lavoisier explained his observations on combustion by hypothesizing that when a substance burns, it combines with a component of air. A good hypothesis is *falsifiable*, which means that it makes predictions that can be confirmed or refuted by further observations. Scientists test hypotheses by **experiments**, highly controlled procedures designed to generate observations that can confirm or refute a hypothesis. The results of an experiment may support a hypothesis or prove it wrong, in which case the scientist must modify or discard the hypothesis. In some cases, a series of similar observations can lead to the development of a **scientific law**, a brief statement that summarizes past observations and predicts future ones. Lavoisier summarized his observations on combustion with the **law of conservation of mass**, which states, "In a chemical reaction, matter is neither created nor destroyed." This statement summarized his observations on chemical reactions and predicted the outcome of future observations on reactions. Laws, like hypotheses, are also subject to experiments, which can support them or prove them wrong.

Scientific laws are not laws in the same sense as civil or governmental laws. Nature does not follow laws in the way that we obey the laws against speeding or running a stop sign. Rather, scientific laws *describe* how nature behaves—they are generalizations about what nature does. For that reason, some people find it more appropriate to refer to them as *principles* rather than *laws*.

One or more well-established hypotheses may form the basis for a scientific **theory**. A scientific theory is a model for the way nature is and tries to explain not merely *what* nature does but *why*. As such, well-established theories are the pinnacle of scientific knowledge, often predicting behavior far beyond the observations or laws from which they were developed. The particulate view of matter grows out of the atomic theory proposed by English chemist John Dalton (1766–1844). Dalton explained the law of conservation of mass, as well as other laws and observations of the time, by proposing that matter is composed of small, indestructible particles called atoms. Since these particles are merely rearranged in chemical reactions (and not created or destroyed), the total amount of mass remains the same. Dalton's theory is a model for the physical world—it gives us insight into how nature works, and therefore *explains* our laws and observations.

The scientific approach always returns to observation to test theories. For example, scientists have tested the atomic theory by isolating single atoms and even imaging them, providing strong validation for the theory. Nonetheless, theories are never proven because some new observation or experiment always has the potential to reveal a flaw.

Established theories with strong experimental support are the most powerful kind of scientific knowledge. You may have heard the phrase, "That is just a theory," as if theories are easily dismissible. Such a statement reveals a deep misunderstanding of the nature of a scientific theory. Well-established theories are as close to truth as we get in science. The idea that all matter is made of atoms is "just a theory," but it has over 200 years of experimental evidence to support it. It is a powerful piece of scientific knowledge on which many other scientific ideas have been built.



1.2
Cc

Conceptual
Connection

Laws and Theories

Which statement best explains the difference between a law and a theory?

- (a) A law is truth, whereas a theory is mere speculation.
- (b) A law summarizes a series of related observations, whereas a theory gives the underlying reasons for them.
- (c) A theory describes *what* nature does, whereas a law describes *why* nature does it.

Creativity and Subjectivity in Science

As we have discussed, empiricism is the hallmark of science. However, that does not mean that creativity, subjectivity, and even a bit of luck do not also play important roles. Novices imagine science to be a strict set of rules and procedures that automatically lead to inarguable, objective facts. But this is not the case. Even our discussion of the scientific approach to knowledge is only an idealization of real science, useful to help us see the key distinctions of science. Real science requires creativity and hard work.

Scientific theories do not just arise out of data—men and women of great genius and creativity craft theories. A great theory is not unlike a master painting, and many see a similar kind of beauty in both.

The Structure of Scientific Revolutions, a book by Thomas Kuhn (1922–1996), published in 1962, details the history of science and highlights the creative and subjective aspects of the scientific approach to knowledge. In the book, Kuhn argues that scientific history does not support the idea that science progresses in the smooth cumulative way one might expect of a wholly objective linear enterprise. Instead, Kuhn shows how science goes through fairly quiet periods that he calls *normal science*. In these periods, scientists make their data fit the reigning theory. Small inconsistencies are swept aside during periods of normal science. However, when too many inconsistencies and anomalies develop, a crisis emerges. The crisis brings about a *revolution* and a new reigning theory. According to Kuhn, the new theory is usually quite different from the old one; it not only helps us to make sense of new or anomalous information, but also enables us to see accumulated data from the past in a dramatically new way.

Kuhn further contends that theories are held for reasons that are not always logical or unbiased and that theories are not *true* models—in the sense of a one-to-one mapping—of the physical world. Because new theories are often so different from the ones they replace, he argues, and because old theories always make good sense to those holding them, they must not be “True” with a capital T; otherwise “truth” would be constantly changing.

Kuhn’s ideas created a controversy among scientists and science historians that continues to this day. Some, especially postmodern philosophers of science, have taken Kuhn’s ideas one step further. They argue that scientific knowledge is *completely* biased and lacks any objectivity. Most scientists, including Kuhn, would disagree. Although Kuhn pointed out that scientific knowledge has *arbitrary elements*, he also said that “Observation ... can and must drastically restrict the range of admissible scientific belief else there would be no science.” In other words, saying that science has arbitrary elements is quite different from saying that science is arbitrary.

1.4 Early Ideas about the Building Blocks of Matter

The first people to propose that matter was composed of small, indestructible particles were Leucippus (fifth century B.C.E., exact dates unknown) and his student Democritus (460–370 B.C.E.). These Greek philosophers theorized that matter was ultimately composed of small, indivisible particles they named *atomos*. Democritus wrote, “The first principles of the universe are atoms and empty space: everything else is merely thought to exist.” Leucippus and Democritus proposed that many different kinds of atoms existed, each different in shape and size, and that they moved randomly through empty space. As we discussed in Section 1.3, other influential Greek thinkers of the time, such as Plato and Aristotle, did not embrace the atomic ideas of Leucippus and Democritus. Instead, they held that matter had no smallest parts (that it was continuous) and that different substances were composed of various proportions of fire, air, earth, and water. Since there was no experimental way to test the relative merits of the competing ideas, Aristotle’s view prevailed, largely because he was so influential. The idea that matter was composed of atoms took a back seat for nearly 2000 years.

In the sixteenth century, modern science began to emerge. A greater emphasis on observation led Nicolaus Copernicus (1473–1543) to publish *On the Revolution of the Heavenly Orbs* in 1543. The publication of that book—which proposed that the sun, not Earth, was at the center of the universe—marks the beginning of what we now call the *scientific revolution*. The next 200 years—and the work of scientists such as Francis Bacon (1561–1626), Johannes Kepler (1571–1630), Galileo Galilei (1564–1642), Robert Boyle (1627–1691), and Isaac Newton (1642–1727)—brought rapid advancement as the scientific approach became the established way to learn about the physical world. By the early 1800s, certain observations led the English chemist John Dalton (introduced in Section 1.3) to offer convincing evidence that supported the early atomic ideas of Leucippus and Democritus and to propose his atomic theory.

1.5 Modern Atomic Theory and the Laws That Led to It

Like most theories, Dalton’s theory that all matter is composed of atoms grew out of observations and laws. The three most important laws that led to the development and acceptance of the atomic theory are the law of conservation of mass, the law of definite proportions, and the law of multiple proportions.



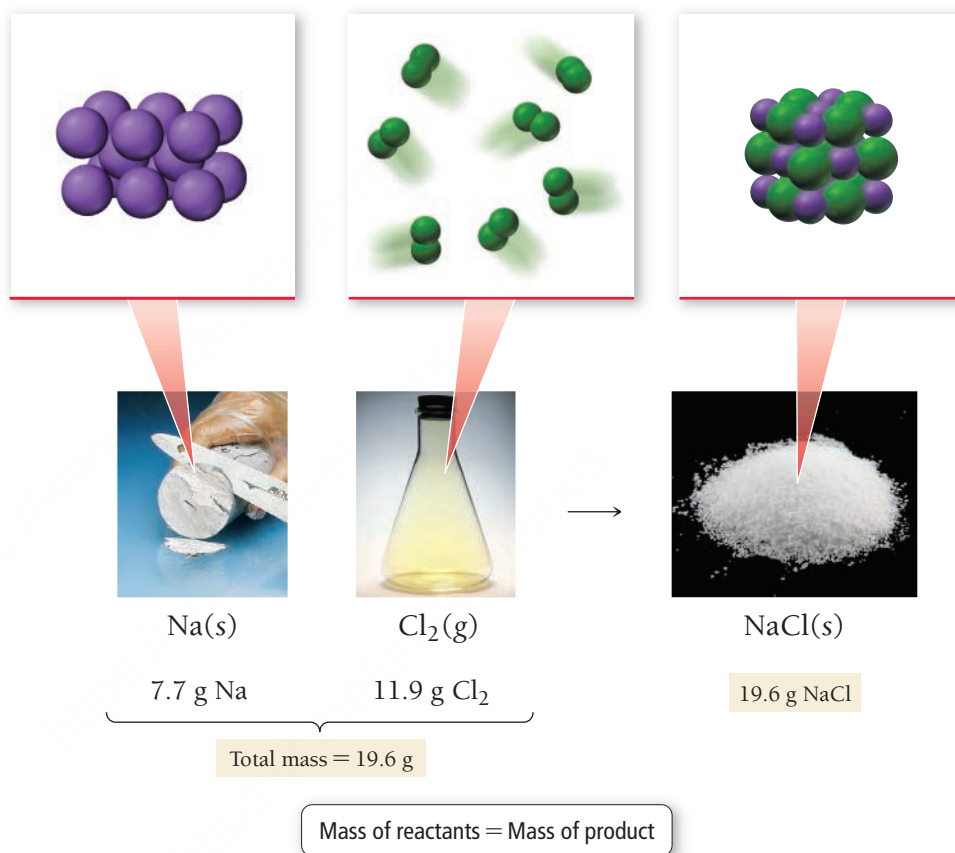
KEY CONCEPT VIDEO
Atomic Theory

The Law of Conservation of Mass

Recall from Section 1.3 that in 1789 Antoine Lavoisier studied combustion and formulated the law of conservation of mass, which states:

In a chemical reaction, matter is neither created nor destroyed.

A **chemical reaction** (discussed more fully in Chapter 7) is a process in which one or more substances are converted into one or more different substances. The law of conservation of mass states that when a chemical reaction occurs, the total mass of the substances involved in the reaction does not change. For example, consider the reaction between sodium and chlorine to form sodium chloride shown here:



The combined mass of the sodium and chlorine that react (the reactants) exactly equals the mass of the sodium chloride that forms (the product). This law is consistent with the idea that matter is composed of small, indestructible particles. The particles rearrange during a chemical reaction, but the number of particles is conserved because the particles themselves are indestructible (at least by chemical means).



Conceptual
Connection

1.3

The Law of Conservation of Mass

When a log completely burns in a campfire, the mass of the ash is much less than the mass of the log. What happens to the matter that composed the log?

The Law of Definite Proportions

In 1797, a French chemist named Joseph Proust (1754–1826) made observations on the composition of compounds. He found that the elements composing a given compound always occur in fixed (or definite) proportions in all samples of the compound. In contrast, the components of a mixture can be present in any proportions whatsoever. He summarized his observations in the **law of definite proportions**:

All samples of a given compound, regardless of their source or how they were prepared, have the same proportions of their constituent elements.

For example, the decomposition of 18.0 g of water results in 16.0 g of oxygen and 2.0 g of hydrogen, or an oxygen-to-hydrogen mass ratio of:

$$\text{mass ratio} = \frac{16.0 \text{ g O}}{2.0 \text{ g H}} = 8.0 \text{ or } 8:1$$

This ratio holds for any sample of pure water, regardless of its origin. The law of definite proportions applies to all compounds. Consider ammonia, a compound composed of nitrogen and hydrogen. Ammonia contains 14.0 g of nitrogen for every 3.0 g of hydrogen, resulting in a nitrogen-to-hydrogen mass ratio of:

$$\text{mass ratio} = \frac{14.0 \text{ g N}}{3.0 \text{ g H}} = 4.7 \text{ or } 4.7:1$$

Again, this ratio is the same for every sample of ammonia. The law of definite proportions hints at the idea that matter is composed of atoms. Compounds have definite proportions of their constituent elements because the atoms that compose them, each with its own specific mass, occur in a definite ratio. Because the ratio of atoms is the same for all samples of a particular compound, the ratio of masses is also the same.

The law of definite proportions is sometimes called the law of constant composition.

EXAMPLE 1.1

Law of Definite Proportions

Two samples of carbon dioxide decompose into their constituent elements. One sample produces 25.6 g of oxygen and 9.60 g of carbon, and the other produces 21.6 g of oxygen and 8.10 g of carbon. Show that these results are consistent with the law of definite proportions.

SOLUTION

To show this, calculate the mass ratio of one element to the other for both samples by dividing the mass of one element by the mass of the other. For convenience, divide the larger mass by the smaller one.

For the first sample:

$$\frac{\text{Mass oxygen}}{\text{Mass carbon}} = \frac{25.6}{9.60} = 2.67 \text{ or } 2.67:1$$

For the second sample:

$$\frac{\text{Mass oxygen}}{\text{Mass carbon}} = \frac{21.6}{8.10} = 2.67 \text{ or } 2.67:1$$

The ratios are the same for the two samples, so these results are consistent with the law of definite proportions.

FOR PRACTICE 1.1

Two samples of carbon monoxide decompose into their constituent elements. One sample produces 17.2 g of oxygen and 12.9 g of carbon, and the other sample produces 10.5 g of oxygen and 7.88 g of carbon. Show that these results are consistent with the law of definite proportions.

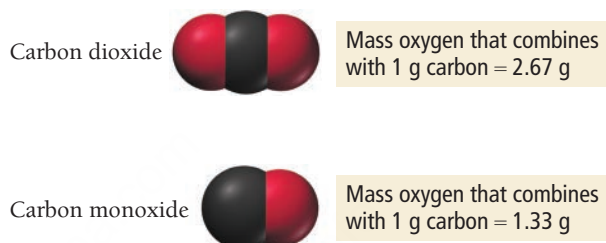
Answers to For Practice and For More Practice Problems are in Appendix IV.

The Law of Multiple Proportions

In 1804, John Dalton published his **law of multiple proportions**:

When two elements (call them A and B) form two different compounds, the masses of element B that combine with 1 g of element A can be expressed as a ratio of small whole numbers.

Dalton already suspected that matter was composed of atoms, so that when two elements A and B combine to form more than one compound, an atom of A combines with either one, two, three, or more atoms of B (AB_1 , AB_2 , AB_3 , etc.). Therefore, the masses of B that react with a fixed mass of A are always related to one another as small whole-number ratios. Consider the compounds carbon monoxide and carbon dioxide, two compounds composed of the same two elements: carbon and oxygen. We saw in Example 1.1 that the mass ratio of oxygen to carbon in carbon dioxide is 2.67:1; therefore, 2.67 g of oxygen reacts with 1 g of carbon. In carbon monoxide, however, the mass ratio of oxygen to carbon is 1.33:1, or 1.33 g of oxygen to every 1 g of carbon.



The ratio of these two masses is a small whole number.

$$\frac{\text{mass oxygen to 1 g carbon in carbon dioxide}}{\text{mass oxygen to 1 g carbon in carbon monoxide}} = \frac{2.67}{1.33} = 2$$

With the help of the molecular models, we can see why the ratio is 2:1—carbon dioxide contains two oxygen atoms to every carbon atom, while carbon monoxide contains only one. Of course, neither John Dalton nor Joseph Proust had access to any kind of modern instrumentation that could detect individual atoms—Dalton supported his atomic ideas primarily by using the *weights* of samples. *But the weights implied that matter was ultimately particulate; what else would explain why these ratios were always whole numbers?*

EXAMPLE 1.2

Law of Multiple Proportions

Nitrogen forms several compounds with oxygen, including nitrogen dioxide and dinitrogen monoxide. Measurements of the masses of nitrogen and oxygen that form upon decomposing these compounds show that nitrogen dioxide contains 2.28 g oxygen to every 1.00 g nitrogen, while dinitrogen monoxide contains 0.570 g oxygen to every 1.00 g nitrogen. Show that these results are consistent with the law of multiple proportions.

SOLUTION

To show this, calculate the ratio of the mass of oxygen from one compound to the mass of oxygen in the other. Always divide the larger of the two masses by the smaller one.

$$\frac{\text{mass oxygen to 1 g nitrogen in nitrogen dioxide}}{\text{mass oxygen to 1 g nitrogen in dinitrogen monoxide}} = \frac{2.28}{0.570} = 4.00$$

The ratio is a small whole number (4); these results are consistent with the law of multiple proportions.

FOR PRACTICE 1.2

Hydrogen and oxygen form both water and hydrogen peroxide. The decomposition of a sample of water forms 0.125 g hydrogen to every 1.00 g oxygen. The decomposition of a sample of hydrogen peroxide forms 0.0625 g hydrogen to every 1.00 g oxygen. Show that these results are consistent with the law of multiple proportions.

The Laws of Definite and Multiple Proportions

1.4

Cc

Conceptual
Connection

Explain the difference between the law of definite proportions and the law of multiple proportions.

John Dalton and the Atomic Theory

In 1808, John Dalton explained the laws discussed in this section with his **atomic theory**, which states that:

1. Each element is composed of tiny, indestructible particles called atoms.
2. All atoms of a given element have the same mass and other properties that distinguish them from the atoms of other elements.
3. Atoms combine in simple, whole-number ratios to form compounds.
4. Atoms of one element cannot change into atoms of another element. In a chemical reaction, atoms only change the way that they are *bound together* with other atoms.

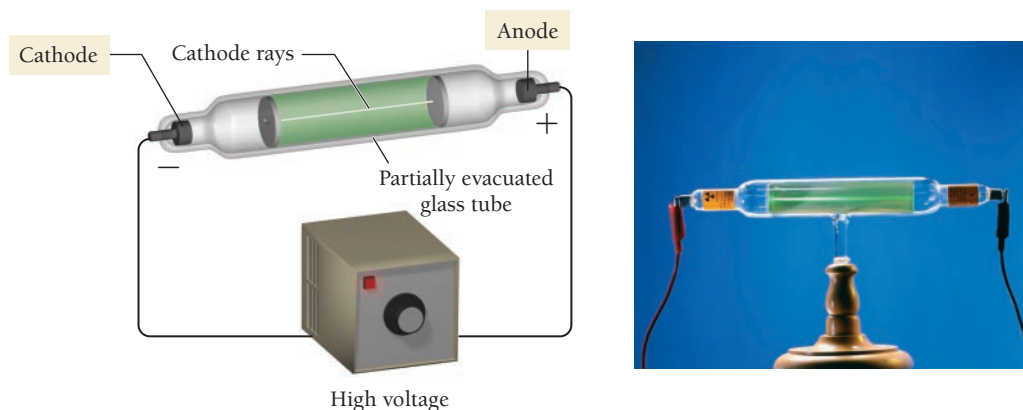
The most important idea presented in this section is that measurements of the relative weights of matter samples in three categories (of samples before and after a reaction; of different samples of the same compound; and of different compounds composed of the same elements) indicate that matter is particulate. These scientists—with the help of a balance—gathered and interpreted data that settled an age-old question: Is matter continuous or particulate? Thanks to the careful observations they made, the evidence confirmed the particulate view.

1.6 The Discovery of the Electron

By the end of the nineteenth century, scientists were convinced that matter was made up of atoms—permanent, supposedly indestructible building blocks that compose everything. However, further experiments revealed that the atom itself is composed of even smaller, more fundamental particles.

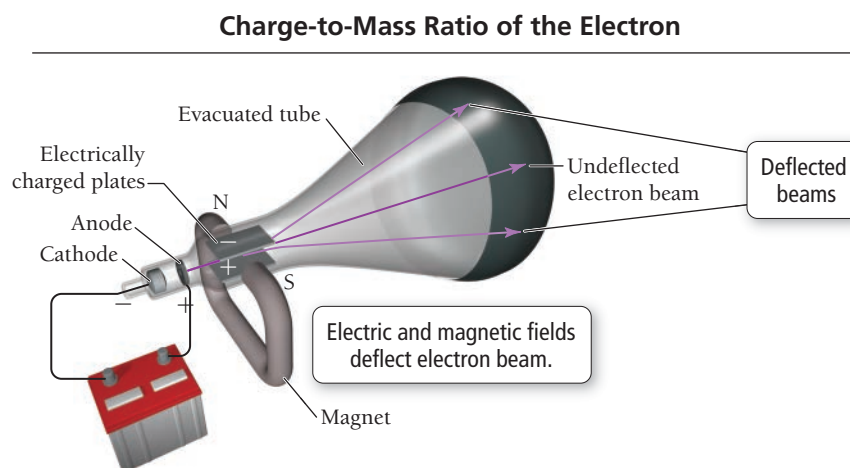
Cathode Rays

In the late 1800s, an English physicist named J. J. Thomson (1856–1940), working at Cambridge University, performed experiments to probe the properties of **cathode rays**. Thomson constructed a partially evacuated glass tube called a **cathode ray tube**, shown in **Figure 1.4** ▼. Thomson then applied a high electrical voltage between two electrodes at either end of the tube. He found that a beam of particles, called cathode rays, traveled from the negatively charged electrode (called the cathode) to the positively charged one (called the anode).

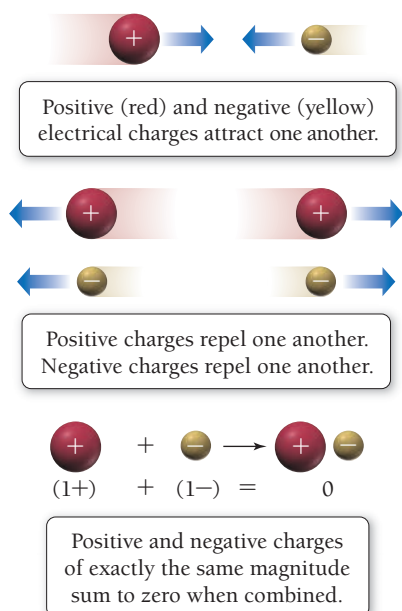


▲ **FIGURE 1.4** Cathode Ray Tube

► **FIGURE 1.5 Thomson's Measurement of the Charge-to-Mass Ratio of the Electron** J. J. Thomson used electric and magnetic fields to deflect the electron beam in a cathode ray tube. By measuring the strengths at which the effects of the two fields (electric and magnetic) canceled exactly, leaving the beam undeflected, he was able to calculate the charge-to-mass ratio of the electron.



Properties of Electrical Charge



For a more complete explanation of electrical voltage, see Chapter 19. The coulomb (C) is the SI unit for charge.

Thomson observed that the particles that compose the cathode ray have the following properties: They travel in straight lines; they are independent of the composition of the material from which they originate (the cathode); and they carry a negative **electrical charge**. Electrical charge is a fundamental property of some of the particles that compose atoms that results in attractive and repulsive forces—called *electrostatic forces*—between those particles. The area around a charged particle where these forces exist is called an *electric field*. The characteristics of electrical charge are summarized in the figure in the margin. You have probably experienced excess electrical charge when brushing your hair on a dry day. The brushing action causes the accumulation of charged particles in your hair, which repel each other, making your hair stand on end.

J. J. Thomson measured the charge-to-mass ratio of the cathode ray particles by deflecting them using electric and magnetic fields, as shown in **Figure 1.5** ▲. The value he measured, -1.76×10^8 coulombs (C) per gram, implied that the cathode ray particle was about 2000 times lighter (less massive) than hydrogen, the lightest known atom. These results were incredible—the indestructible atom could apparently be chipped!

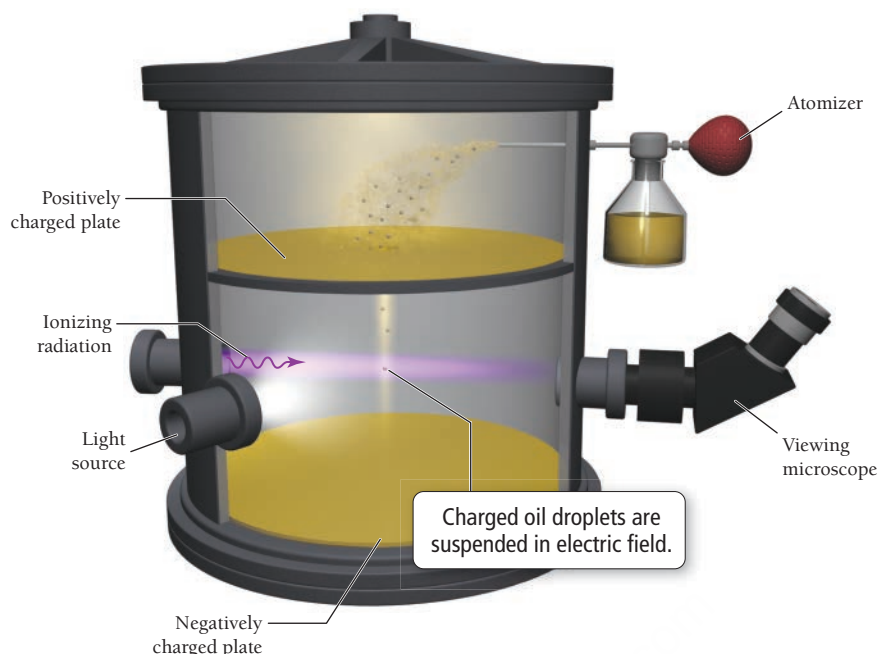
J. J. Thomson had discovered the **electron**, a negatively charged, low-mass particle present within all atoms. He wrote, “We have in the cathode rays matter in a new state, a state in which the subdivision of matter is carried very much further . . . a state in which all matter . . . is of one and the same kind; this matter being the substance from which all the chemical elements are built up.”

Millikan's Oil Drop Experiment: The Charge of the Electron

In 1909, American physicist Robert Millikan (1868–1953), working at the University of Chicago, performed his now famous oil drop experiment in which he deduced the charge of a single electron. The apparatus for the oil drop experiment is shown in **Figure 1.6** ►.

In his experiment, Millikan sprayed oil into fine droplets using an atomizer (a squeezable bulb). The droplets fell, under the influence of gravity, through a small hole into the lower portion of the apparatus where Millikan viewed them with the aid of a light source and a viewing microscope. During their fall, the drops acquired electrons that had been produced by bombarding the air in the chamber with ionizing radiation (a kind of energy described in Chapter 2). The electrons imparted a negative charge to the drops. In the lower portion of the apparatus, Millikan created an electric field between two metal plates. Since the lower plate was negatively charged, and since Millikan could vary the strength of the electric field, he could slow or even reverse the free fall of the negatively charged drops. (Remember that like charges repel each other.)

By measuring the strength of the electric field required to halt the free fall of the drops, and by figuring out the masses of the drops themselves (determined from their radii and density), Millikan calculated the charge of each drop. He then reasoned that, since each drop must contain an integral (or whole) number of electrons, the charge of each drop must be a whole-number multiple of the electron's charge. Indeed, Millikan was correct; the measured charge on any drop was always a whole-number multiple of -1.60×10^{-19} C, the fundamental charge of a single electron.



▲ FIGURE 1.6 Millikan's Measurement of the Electron's Charge Millikan calculated the charge on oil droplets falling in an electric field. He found that it was always a whole-number multiple of $-1.60 \times 10^{-19} \text{ C}$, the charge of a single electron.

With this number in hand, and knowing Thomson's mass-to-charge ratio for electrons, we can deduce the mass of an electron:

$$\text{charge} \times \frac{\text{mass}}{\text{charge}} = \text{mass}$$

$$-1.60 \times 10^{-19} \text{ C} \times \frac{\text{g}}{-1.76 \times 10^8 \text{ C}} = 9.10 \times 10^{-28} \text{ g}$$

As Thomson had correctly determined, this mass is about 2000 times lighter than hydrogen, the lightest atom.


Why did scientists work so hard to measure the charge of the electron? Since the electron is a fundamental building block of matter, scientists want to know its properties, including its charge. The magnitude of the charge of the electron is of tremendous importance because it determines how strongly an atom holds its electrons. Imagine how matter would be different if electrons had a much smaller charge, so that atoms held them more loosely. Many atoms might not even be stable. On the other hand, imagine how matter would be different if electrons had a much greater charge, so that atoms held them more tightly. Since atoms form compounds by exchanging and sharing electrons (more on this in Chapter 5), there could be fewer compounds or maybe even none. Without the abundant diversity of compounds, life would not be possible. So, the magnitude of the charge of the electron—even though it may seem like an insignificantly small number—has great importance.

The Millikan Oil Drop Experiment

Suppose that one of Millikan's oil drops has a charge of $-4.8 \times 10^{-19} \text{ C}$. How many excess electrons does the drop contain?

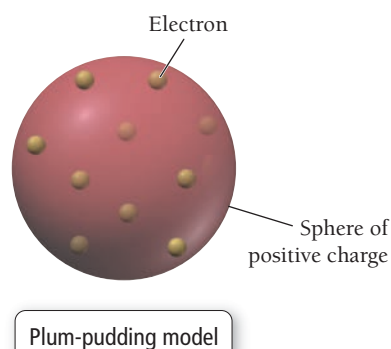
1.5
Cc

Conceptual
Connection



1.7 The Structure of the Atom

The discovery of negatively charged particles within atoms raised a new question: Since atoms are charge-neutral, they must contain positive charge that neutralizes the negative charge of the electrons—but how do the positive and negative charges fit together? Are atoms just a jumble of even more fundamental particles? Are they solid spheres? Do they have some internal structure? J. J. Thomson proposed that the negatively charged electrons were small particles held within a positively charged sphere, as shown here.



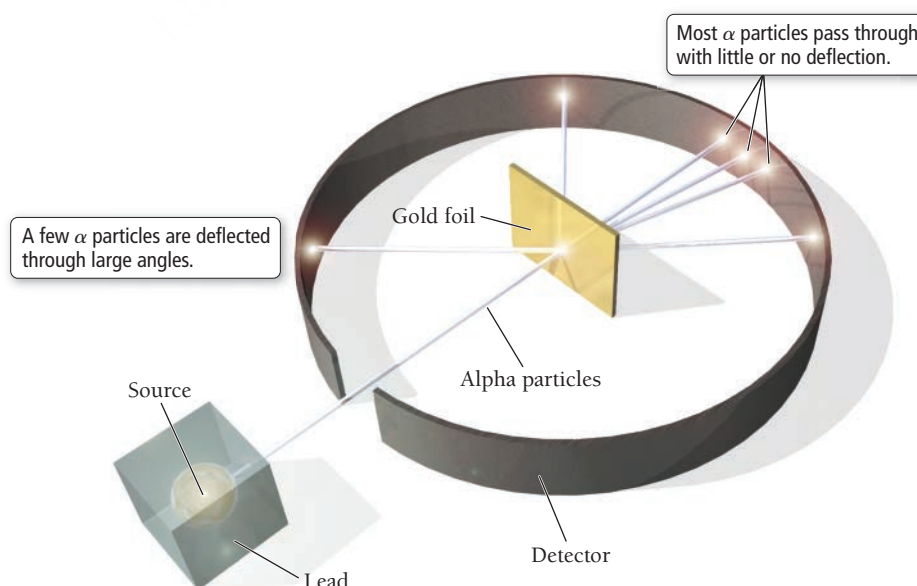
This model, the most popular of its time, became known as the plum-pudding model. The model suggested by Thomson, to those of us not familiar with plum pudding (a British dessert), was like a blueberry muffin, where the blueberries are the electrons and the muffin is the sphere of positive charge.

The discovery of **radioactivity**—the emission of small energetic particles from the core of certain unstable atoms—by scientists Antonie-Henri Becquerel (1852–1908) and Marie Curie (1867–1934) at the end of the nineteenth century allowed researchers to experimentally probe the structure of the atom. At the time, scientists had identified three different types of radioactivity: alpha (α) particles, beta (β) particles, and gamma (γ) rays. We will discuss these and other types of radioactivity in more detail in Chapter 20. For now, just know that α particles are positively charged and that they are by far the most massive of the three.

In 1909, Ernest Rutherford (1871–1937) and his coworkers performed an experiment in an attempt to confirm Thomson's model (Rutherford had worked under Thomson and subscribed to his plum-pudding model). Instead, Rutherford's experiment, which employed α particles, proved Thomson wrong. In the experiment, positively charged α particles were directed at an ultrathin sheet of gold foil, as shown in **Figure 1.7** ▼.

Alpha particles are about 7000 times more massive than electrons.

Rutherford's Gold Foil Experiment



► **FIGURE 1.7 Rutherford's Gold Foil Experiment** Alpha particles were directed at a thin sheet of gold foil. Most of the particles passed through the foil, but a small fraction were deflected and a few even bounced backward.

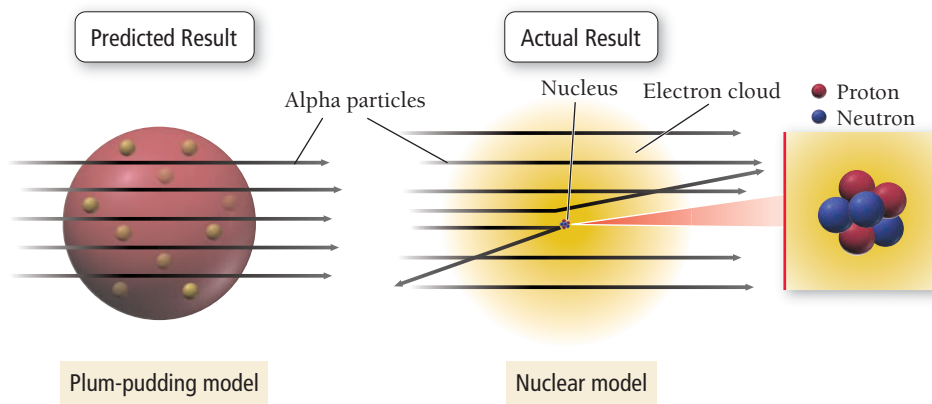


FIGURE 1.8 The Nuclear Atom
Rutherford's results could not be explained by the plum-pudding model. Instead, they suggested that the atom has a small, dense nucleus.

These particles were to act as probes of the gold atoms' structure. If the gold atoms were indeed like blueberry muffins or plum pudding—with their mass and charge spread throughout the entire volume of the atom—these speeding probes should pass right through the gold foil with minimum deflection.

When Rutherford and his coworkers performed the experiment, the results were not what they expected. A majority of the particles did pass directly through the foil, but some particles were deflected and some (approximately 1 in 20,000) even bounced back. The results puzzled Rutherford, who wrote that they were “about as credible as if you had fired a 15-inch shell at a piece of tissue paper and it came back and hit you.” What sort of atomic structure could explain this odd behavior?

Rutherford created a new model—a modern version of which is shown in **Figure 1.8** ▲ beside the plum-pudding model—to explain his results.


Rutherford realized that to account for the observed deflections, the mass and positive charge of an atom must be concentrated in a space much smaller than the size of the atom itself. He concluded that, in contrast to the plum-pudding model, matter must not be as uniform as it appears. It must contain large regions of empty space dotted with small regions of very dense matter. Building on this idea, he proposed the **nuclear theory** of the atom, with three basic parts:

1. Most of the atom's mass and all of its positive charge are contained in a small core called the **nucleus**.
2. Most of the volume of the atom is empty space, throughout which tiny, negatively charged electrons are dispersed.
3. There are as many negatively charged electrons outside the nucleus as there are positively charged particles (named **protons**) within the nucleus, so that the atom is electrically neutral.

Although Rutherford's model was highly successful, scientists realized that it was incomplete. For example, hydrogen atoms contain one proton, and helium atoms contain two, yet a hydrogen atom has only one-fourth the mass of a helium atom. Why? The helium atom must contain some additional mass. Subsequent work by Rutherford and one of his students, British scientist James Chadwick (1891–1974), demonstrated that the previously unaccounted for mass was due to **neutrons**, neutral particles within the nucleus. The mass of a neutron is similar to that of a proton, but a neutron has no electrical charge. The helium atom is four times as massive as the hydrogen atom because it contains two protons *and two neutrons* (while hydrogen contains only one proton and no neutrons).

The dense nucleus contains over 99.9% of the mass of the atom but occupies very little of its volume. For now, we can think of the electrons that surround the nucleus as analogous to the water droplets that make up a cloud—although their mass is relatively small, they are dispersed over a very large volume. Consequently, an atom, like a cloud, is mostly empty space.

Rutherford's nuclear theory was a success and is still valid today. The revolutionary part of this theory is the idea that matter—at its core—is much less uniform than it appears. If the nucleus of the atom were the size of the period at the end of this sentence, the average electron would be about 10 m away. Yet the period would contain nearly all of the atom's mass. Imagine what matter would be like if atomic structure were different. What if matter were composed of atomic nuclei piled on top of each other like marbles in a box? Such matter would be incredibly dense; a single grain of sand composed of solid atomic nuclei would have a mass of 5 million kg (or a weight of about 11 million pounds). Astronomers believe there are some objects in the universe composed of such matter—neutron stars.



KEY CONCEPT VIDEO
Subatomic Particles and
Isotope Symbols

If matter really is mostly empty space, as Rutherford suggested, then why does it appear so solid? Why do we tap our knuckles on a table and feel a solid thump? Matter appears solid because the variation in its density is on such a small scale that our eyes cannot see it. Imagine a scaffolding 100 stories high and the size of a football field. The volume of the scaffolding is mostly empty space. Yet if you viewed it from an airplane, it would appear as a solid mass. Matter is similar. When you tap your knuckle on the table, it is much like one giant scaffolding (your finger) crashing into another (the table). Even though they are both primarily empty space, one does not fall into the other.

1.8 Subatomic Particles: Protons, Neutrons, and Electrons

All atoms are composed of the same subatomic particles: protons, neutrons, and electrons. Protons and neutrons, as we saw in Section 1.7, have nearly identical masses. In SI units, the mass of the proton is 1.67262×10^{-27} kg, and the mass of the neutron is 1.67493×10^{-27} kg. A more common unit to express these masses is the **atomic mass unit (amu)**, defined as 1/12 the mass of a carbon atom containing six protons and six neutrons. The mass of a proton or neutron is approximately 1 amu. Electrons, by contrast, have an almost negligible mass of 0.00091×10^{-27} kg or 0.00055 amu.

Recall that the proton and the electron both have electrical *charge*. We know from Millikan’s oil drop experiment that the electron has a charge of -1.60×10^{-19} C. In atomic (or relative) units, the electron is assigned a charge of 1– and the proton is assigned a charge of 1+. *The charges of the proton and the electron are equal in magnitude but opposite in sign*, so that when the two particles are paired, the charges sum to zero. The neutron has no charge.

Most matter is charge-neutral (it has no overall charge) because protons and electrons are present in equal numbers. When matter does acquire charge imbalances, these imbalances usually equalize quickly, often in dramatic ways. For example, the shock you receive when touching a doorknob during dry weather is the equalization of a charge imbalance that develops as you walk across the carpet. Lightning is an equalization of charge imbalances that develop during electrical storms.

A sample of matter—even a tiny sample, such as a grain of sand—composed of only protons or only electrons, would have extraordinary repulsive forces inherent within it and would be unstable. Luckily, matter is not that way. Table 1.1 summarizes the properties of protons, neutrons, and electrons.

TABLE 1.1 Subatomic Particles

	Mass (kg)	Mass (amu)	Charge (relative)	Charge (C)
Proton	1.67262×10^{-27}	1.00727	1+	$+1.60218 \times 10^{-19}$
Neutron	1.67493×10^{-27}	1.00866	0	0
Electron	0.00091×10^{-27}	0.00055	1–	-1.60218×10^{-19}

Elements: Defined by Their Numbers of Protons

If all atoms are composed of the same subatomic particles, what makes the atoms of one element different from those of another? The answer is the *number* of these particles. The most important number to the *identity* of an atom is the number of protons in its nucleus. *The number of protons defines the element*. For example, an atom with 2 protons in its nucleus is a helium atom; an atom with 6 protons in its nucleus is a carbon atom (**Figure 1.9** ▶); and an atom with 92 protons in its nucleus is a uranium atom. The number of protons in an atom’s nucleus is its **atomic number** and is given the symbol *Z*. The atomic numbers of known elements range from 1 to 116 (although additional elements may still be discovered), as shown in the **periodic table** of the elements (**Figure 1.10** ▶). In the periodic table, which we will describe in more detail in Chapter 3, the elements are arranged so that those with similar properties are in the same column.

The number of protons in the nucleus of an atom determines the charge of the nucleus. For example, carbon has 6 protons and therefore a nuclear charge of 6+.

The Number of Protons Defines the Element

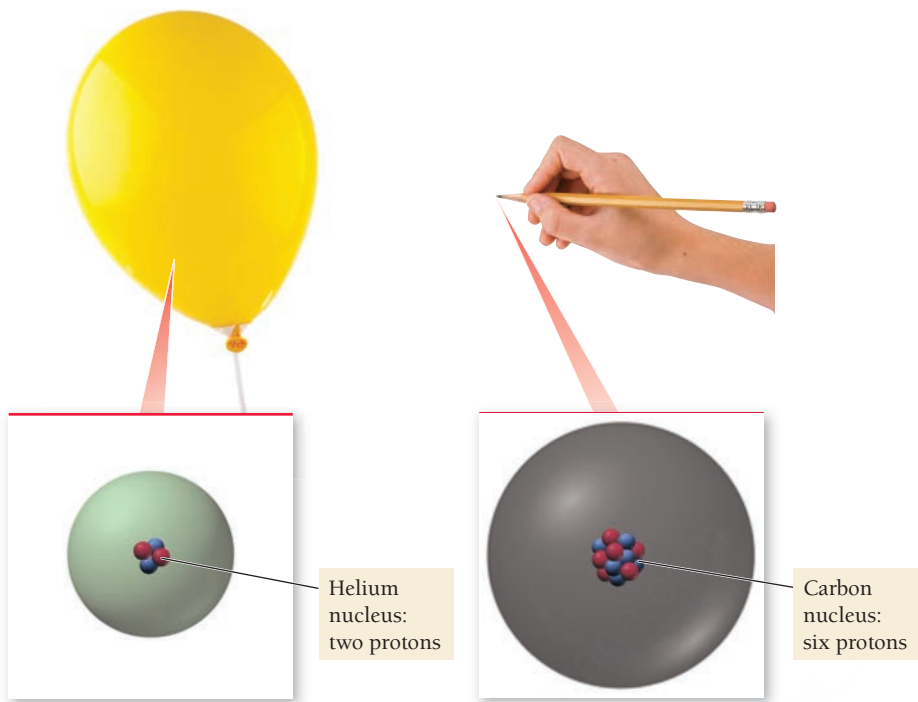


FIGURE 1.9 How Elements Differ Each element is defined by a unique atomic number (*Z*), the number of protons in the nucleus of every atom of that element. The number of protons determines the charge of the nucleus.

The Periodic Table

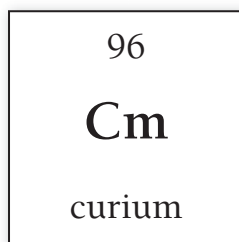
Atomic number (*Z*)

Chemical symbol

Name

1 H hydrogen	2 He helium																
3 Li lithium	4 Be beryllium	5 B boron	6 C carbon	7 N nitrogen	8 O oxygen	9 F fluorine	10 Ne neon										
11 Na sodium	12 Mg magnesium	13 Al aluminum	14 Si silicon	15 P phosphorus	16 S sulfur	17 Cl chlorine	18 Ar argon										
19 K potassium	20 Ca calcium	21 Sc scandium	22 Ti titanium	23 V vanadium	24 Cr chromium	25 Mn manganese	26 Fe iron	27 Co cobalt	28 Ni nickel	29 Cu copper	30 Zn zinc	31 Ga gallium	32 Ge germanium	33 As arsenic	34 Se selenium	35 Br bromine	36 Kr krypton
37 Rb rubidium	38 Sr strontium	39 Y yttrium	40 Zr zirconium	41 Nb niobium	42 Mo molybdenum	43 Tc technetium	44 Ru ruthenium	45 Rh rhodium	46 Pd palladium	47 Ag silver	48 Cd cadmium	49 In indium	50 Sn tin	51 Sb antimony	52 Te tellurium	53 I iodine	54 Xe xenon
55 Cs cesium	56 Ba barium	57 La lanthanum	72 Hf hafnium	73 Ta tantalum	74 W tungsten	75 Re rhenium	76 Os osmium	77 Ir iridium	78 Pt platinum	79 Au gold	80 Hg mercury	81 Tl thallium	82 Pb lead	83 Bi bismuth	84 Po polonium	85 At astatine	86 Rn radon
87 Fr francium	88 Ra radium	89 Ac actinium	104 Rf rutherfordium	105 Db dubnium	106 Sg seaborgium	107 Bh bohrium	108 Hs hassium	109 Mt meitnerium	110 Ds darmstadtium	111 Rg roentgenium	112 Cn copernicium	113 Nh nihonium	114 Fl flerovium	115 Mc moscovium	116 Lv livermorium	117 Ts tennessine	118 Og oganesson
58 Ce cerium	59 Pr praseodymium	60 Nd neodymium	61 Pm promethium	62 Sm samarium	63 Eu europium	64 Gd gadolinium	65 Tb terbium	66 Dy dysprosium	67 Ho holmium	68 Er erbium	69 Tm thulium	70 Yb ytterbium	71 Lu lutetium				
90 Th thorium	91 Pa protactinium	92 U uranium	93 Np neptunium	94 Pu plutonium	95 Am americium	96 Cm curium	97 Bk berkelium	98 Cf californium	99 Es einsteinium	100 Fm fermium	101 Md mendelevium	102 No nobelium	103 Lr lawrencium				

FIGURE 1.10 The Periodic Table Each element is represented by its symbol and atomic number. Elements in the same column have similar properties.



▲ Element 96 is named curium, after Marie Curie, co-discoverer of radioactivity.

Each element, identified by its unique atomic number, is represented with a unique **chemical symbol**, a one- or two-letter abbreviation listed directly below its atomic number on the periodic table. The chemical symbol for helium is He; for carbon, it is C; and for uranium, it is U. The chemical symbol and the atomic number always go together. If the atomic number is 2, the chemical symbol *must be* He. If the atomic number is 6, the chemical symbol *must be* C. This is another way of saying that the number of protons defines the element.

Most chemical symbols are based on the English name of the element. For example, the symbol for sulfur is S; for oxygen, O; and for chlorine, Cl. Several of the oldest known elements, however, have symbols based on their Latin names. For example, the symbol for sodium is Na from the Latin *natrium*, and the symbol for tin is Sn from the Latin *stannum*. Early scientists often gave newly discovered elements names that reflect their properties. For example, argon originates from the Greek word *argos* meaning inactive, referring to argon's chemical inertness (it does not react with other elements). Chlorine originates from the Greek word *chloros* meaning pale green, referring to chlorine's pale green color. Other elements, including helium, selenium, and mercury, are named after figures from Greek or Roman mythology or astronomical bodies. Still others (such as europium, polonium, and berkelium) are named for the places where they were discovered or where their discoverers were born. More recently, elements have been named after scientists—for example, curium for Marie Curie, einsteinium for Albert Einstein, and rutherfordium for Ernest Rutherford.

Isotopes: When the Number of Neutrons Varies

All atoms of a given element have the same number of protons; however, they do not necessarily have the same number of neutrons. Since neutrons have nearly the same mass as protons (1 amu), this means that—contrary to what John Dalton originally proposed in his atomic theory—all atoms of a given element *do not* have the same mass. For example, all neon atoms contain 10 protons, but they may contain 10, 11, or 12 neutrons. All three types of neon atoms exist, and each has a slightly different mass. Atoms with the same number of protons but different numbers of neutrons are called **isotopes**. Some elements, such as beryllium (Be) and aluminum (Al), have only one naturally occurring isotope, while other elements, such as neon (Ne) and chlorine (Cl), have two or more.

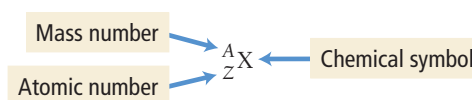
The relative amount of each different isotope in a naturally occurring sample of a given element is roughly constant. For example, in any natural sample of neon atoms, 90.48% of them are the isotope with 10 neutrons, 0.27% are the isotope with 11 neutrons, and 9.25% are the isotope with 12 neutrons. These percentages are called the **natural abundance** of the isotopes. Each element has its own characteristic natural abundance of isotopes. However, advances in mass spectrometry have allowed accurate measurements that reveal small but significant variations in the natural abundance of isotopes for many elements.

The sum of the number of neutrons and protons in an atom is its **mass number** and is represented by the symbol A :

$$A = \text{number of protons (p)} + \text{number of neutrons (n)}$$

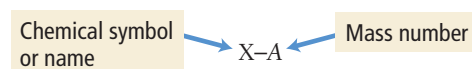
For neon, with 10 protons, the mass numbers of the three different naturally occurring isotopes are 20, 21, and 22, corresponding to 10, 11, and 12 neutrons, respectively.

We symbolize isotopes using this notation:



where X is the chemical symbol, A is the mass number, and Z is the atomic number. Therefore, the symbols for the neon isotopes are ${}^{20}_{10}\text{Ne}$, ${}^{21}_{10}\text{Ne}$, ${}^{22}_{10}\text{Ne}$. Notice that the chemical symbol, Ne, and the atomic number, 10, are redundant: If the atomic number is 10, the symbol must be Ne. The mass numbers, however, are different for the different isotopes, reflecting the different number of neutrons in each one.

A second common notation for isotopes is the chemical symbol (or chemical name) followed by a dash and the mass number of the isotope.



In this notation, the neon isotopes are:

Ne-20 Ne-21 Ne-22

neon-20 neon-21 neon-22

We can summarize what we have discussed about the neon isotopes in a table:

Symbol	Number of Protons	Number of Neutrons	A (Mass Number)	Natural Abundance (%)
Ne-20 or $^{20}_{10}\text{Ne}$	10	10	20	90.48
Ne-21 or $^{21}_{10}\text{Ne}$	10	11	21	0.27
Ne-22 or $^{22}_{10}\text{Ne}$	10	12	22	9.25

Notice that all isotopes of a given element have the same number of protons (otherwise they would be different elements). Notice also that the mass number is the *sum* of the number of protons and the number of neutrons. The number of neutrons in an isotope is therefore the difference between the mass number and the atomic number ($A-Z$). The different isotopes of an element generally exhibit the same chemical behavior—the three isotopes of neon, for example, all exhibit chemical inertness.

The eText 2.0 icon indicates that this feature is embedded and interactive in the eText.

EXAMPLE 1.3

Atomic Numbers, Mass Numbers, and Isotope Symbols

Interactive
Worked Example
Video 1.3

PEARSON
eText
2.0

- (a) What are the atomic number (Z), mass number (A), and symbol of the chlorine isotope with 18 neutrons?
- (b) How many protons, electrons, and neutrons are present in an atom of $^{52}_{24}\text{Cr}$?

SOLUTION

<div>(a) Look up the atomic number (Z) for chlorine on the periodic table. The atomic number specifies the number of protons. The mass number (A) for an isotope is the sum of the number of protons and the number of neutrons. The symbol for an isotope is its two-letter abbreviation with the atomic number (Z) in the lower left corner and the mass number (A) in the upper left corner.</div>	<div>$Z = 17$, so chlorine has 17 protons.</div> <div>$A = \text{number of protons} + \text{number of neutrons}$ $= 17 + 18 = 35$</div> <div>$^{35}_{17}\text{Cl}$</div>
<div>(b) For any isotope (in this case $^{52}_{24}\text{Cr}$), the number of protons is indicated by the atomic number located at the lower left. Since this is a neutral atom, the number of electrons equals the number of protons. The number of neutrons is equal to the mass number (upper left) minus the atomic number (lower left).</div>	<div>Number of protons $= Z = 24$ Number of electrons $= 24$ (neutral atom)</div> <div>Number of neutrons $= 52 - 24 = 28$</div>

FOR PRACTICE 1.3

- (a) What are the atomic number, mass number, and symbol for the carbon isotope with 7 neutrons?
- (b) How many protons and neutrons are present in an atom of $^{39}_{19}\text{K}$?

Carbon has two naturally occurring isotopes: C-12 (natural abundance is 98.93%) and C-13 (natural abundance is 1.07%). Using circles to represent protons and squares to represent neutrons, draw the nucleus of each carbon isotope. How many C-13 atoms are present, on average, in a 10,000-atom sample of carbon?

Isotopes

1.6
Cc
Conceptual
Connection

PEARSON
eText
2.0

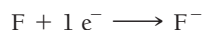
Ions: Losing and Gaining Electrons

The number of electrons in a neutral atom is equal to the charge of its nucleus, which is determined by the number of protons in its nucleus (designated by its atomic number Z). During chemical changes, however, atoms can lose or gain electrons and become charged particles called **ions**. For example, neutral lithium (Li) atoms contain 3 protons and 3 electrons; however, in many chemical reactions lithium atoms lose one electron (e^-) to form Li^+ ions.



The charge of an ion is indicated in the upper right corner of the chemical symbol. Since the Li^+ ion contains 3 protons and only 2 electrons, its charge is $1+$ (ion charges are written as the magnitude first followed by the sign of the charge; for a charge of $1+$, the 1 is usually dropped and the charge is written as simply $+$).

Ions can also be negatively charged. For example, neutral fluorine (F) atoms contain 9 protons and 9 electrons; however, in many chemical reactions fluorine atoms gain one electron to form F^- ions.



The F^- ion contains 9 protons and 10 electrons, resulting in a charge of $1-$ (written simply $-$). For many elements, such as lithium and fluorine, the ion is much more common than the neutral atom. Lithium and fluorine occur in nature mostly as ions.

Positively charged ions, such as Li^+ , are **cations** and negatively charged ions, such as F^- , are **anions**. Ions behave quite differently than the atoms from which they are formed (because the structure of particles—including their charge—determines the properties of the matter they compose). Neutral sodium atoms, for example, are extremely unstable, reacting violently with most things they contact. Sodium cations (Na^+), by contrast, are relatively inert—we eat them all the time in sodium chloride (table salt). In ordinary matter, cations and anions always occur together so that matter is charge-neutral overall.



1.7 Cc

Conceptual
Connection

The Nuclear Atom, Isotopes, and Ions

In light of the nuclear model for the atom, which statement is true?

- For a given element, the size of an isotope with more neutrons is larger than one with fewer neutrons.
- For a given element, the size of an atom is the same for all of the element's isotopes.

Atomic mass is sometimes called *atomic weight* or *standard atomic weight*.

In this book, we use the atomic masses recommended by the International Union of Pure and Applied Chemistry (IUPAC) for users seeking an atomic mass value for an unspecified sample. Detailed studies of the atomic masses of many samples, however, have shown that atomic masses are not constants of nature because the exact isotopic abundances in any given sample depend on the history of the sample.

1.9 Atomic Mass: The Average Mass of an Element's Atoms

An important part of Dalton's atomic theory is that all atoms of a given element have the same mass. In Section 1.8, we learned that because of isotopes, the atoms of a given element often have different masses, so Dalton was not completely correct. We can, however, calculate an average mass—called the **atomic mass**—for each element.

The atomic mass of each element is listed directly beneath the element's symbol in the periodic table and represents the average mass of the isotopes that compose that element, *weighted according to the natural abundance of each isotope*. For example, the periodic table lists the atomic mass of chlorine as 35.45 amu. Naturally occurring chlorine consists of 75.77% chlorine-35 atoms (mass 34.97 amu) and 24.23% chlorine-37 atoms (mass 36.97 amu). We can calculate its atomic mass:

$$\text{Atomic mass} = 0.7577(34.97 \text{ amu}) + 0.2423(36.97 \text{ amu}) = 35.45 \text{ amu}$$

Naturally occurring chlorine contains more chlorine-35 atoms than chlorine-37 atoms, so the weighted average mass of chlorine is closer to 35 amu than to 37 amu.

17
Cl
35.45
chlorine

We generally calculate the atomic mass with the equation:

$$\begin{aligned}\text{Atomic mass} &= \sum_n (\text{fraction of isotope } n) \times (\text{mass of isotope } n) \\ &= (\text{fraction of isotope 1} \times \text{mass of isotope 1}) \\ &\quad + (\text{fraction of isotope 2} \times \text{mass of isotope 2}) \\ &\quad + (\text{fraction of isotope 3} \times \text{mass of isotope 3}) + \dots\end{aligned}$$

where the fractions of each isotope are the percent natural abundances converted to their decimal values. The concept of atomic mass is useful because it allows us to assign a characteristic mass to each element, and, as we will see shortly, it allows us to quantify the number of atoms in a sample of that element.

When percentages are used in calculations, we convert them to their decimal value by dividing by 100.

EXAMPLE 1.4

Atomic Mass

Interactive
Worked Example
Video 1.4

PEARSON
eText
2.0

Copper has two naturally occurring isotopes: Cu-63 with mass 62.9396 amu and a natural abundance of 69.17%, and Cu-65 with mass 64.9278 amu and a natural abundance of 30.83%. Calculate the atomic mass of copper.

SOLUTION

Convert the percent natural abundances into decimal form by dividing by 100.	$\begin{aligned}\text{Fraction Cu-63} &= \frac{69.17}{100} = 0.6917 \\ \text{Fraction Cu-65} &= \frac{30.83}{100} = 0.3083\end{aligned}$
Calculate the atomic mass using the equation given in the text. (See Section E.4 for significant figure and rounding conventions.)	$\begin{aligned}\text{Atomic mass} &= 0.6917(62.9396 \text{ amu}) + 0.3083(64.9278 \text{ amu}) \\ &= 43.5353 \text{ amu} + 20.0172 \text{ amu} = \underline{63.5525} = 63.55 \text{ amu}\end{aligned}$ <p>The magnitude of the answer makes sense given that approximately two-thirds of the atoms have a mass of nearly 63 amu and one-third have a mass of nearly 65. The weighted average should be closer to 63 than 65.</p>

FOR PRACTICE 1.4

Magnesium has three naturally occurring isotopes with masses of 23.99 amu, 24.99 amu, and 25.98 amu and natural abundances of 78.99%, 10.00%, and 11.01%, respectively. Calculate the atomic mass of magnesium.

FOR MORE PRACTICE 1.4

Gallium has two naturally occurring isotopes: Ga-69 with a mass of 68.9256 amu and a natural abundance of 60.11%, and Ga-71. Use the atomic mass of gallium from the periodic table to find the mass of Ga-71.

Atomic Mass

1.8
Cc
Conceptual Connection

PEARSON
eText
2.0

Recall from Conceptual Connection 1.6 that carbon has two naturally occurring isotopes: C-12 (natural abundance is 98.93%; mass is 12.0000 amu) and C-13 (natural abundance is 1.07%; mass is 13.0034 amu). Without doing any calculations, determine which mass is closest to the atomic mass of carbon.

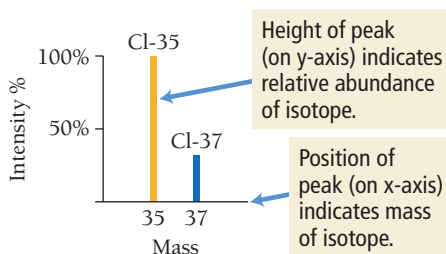
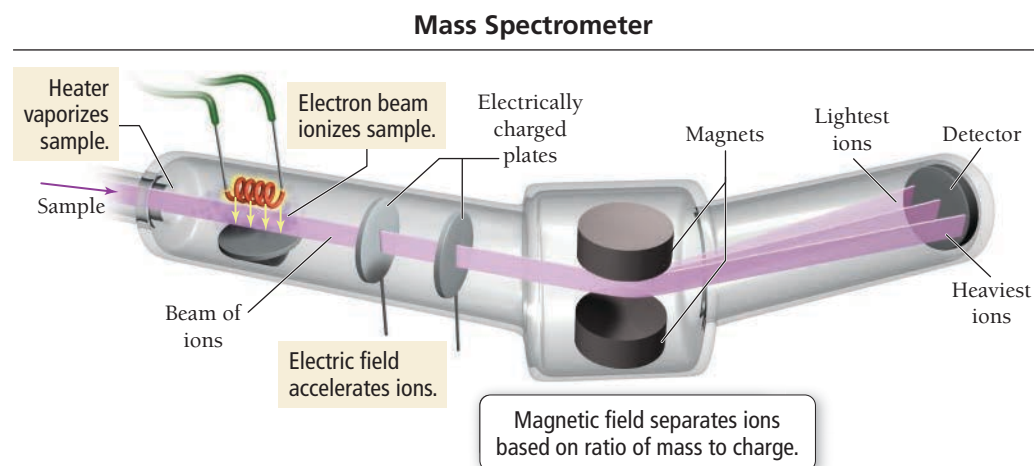
(a) 12.00 amu (b) 12.50 amu (c) 13.00 amu

Mass Spectrometry: Measuring the Mass of Atoms and Molecules

The masses of atoms and the percent abundances of isotopes of elements are measured using **mass spectrometry**, a technique that separates particles according to their mass. In a mass spectrometer, such as the one in **Figure 1.11** ► on the next page, the sample (containing the atoms whose mass is to be measured) is injected into the instrument and vaporized. The vaporized atoms are ionized by an electron beam—the

► **FIGURE 1.11 The Mass**

Spectrometer Atoms are converted to positively charged ions, accelerated, and passed through a magnetic field that deflects their path. The heaviest ions undergo the least deflection.

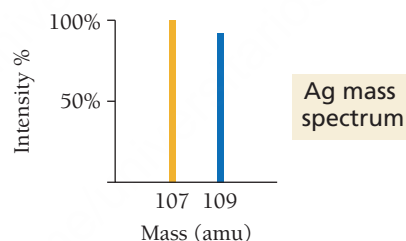
▲ **FIGURE 1.12 The Mass Spectrum**

of Chlorine The position of each peak on the x-axis indicates the mass of the isotope. The intensity (or height) of the peak indicates the relative abundance of the isotope. The intensity of the highest peak is usually set to 100%, and the intensity of all other peaks is reported relative to the most intense one.

electrons in the beam collide with the atoms, removing electrons and creating positively charged ions. The ions are then accelerated into a magnetic field. When ions drift through a magnetic field, they experience a force that bends their trajectory. The amount of bending depends on the mass (and charge) of the ions—the trajectories of lighter ions are bent more than those of heavier ones (of the same charge).

In the right side of the spectrometer shown in Figure 1.11, you can see three different paths, each corresponding to ions of different mass. Finally, the ions strike a detector and produce an electrical signal that is recorded. The result is the separation of the ions according to their mass, producing a mass spectrum such as the one in **Figure 1.12**. The position of each peak on the x-axis indicates the mass of the isotope that was ionized, and the intensity (indicated by the height of the peak) indicates the relative abundance of that isotope.

We can use the mass spectrum of an elemental sample to determine the atomic mass of that sample of the element. For example, consider the mass spectrum of a naturally occurring sample of silver:



The two peaks correspond to the two naturally occurring isotopes of silver. We determine the percent abundance of each isotope from the intensity of each line. However, the *total* intensity must be *normalized*—it must be made to equal 100%. We accomplish this by dividing the intensity of each peak by the total intensity:

$$\text{abundance of Ag-107} = \frac{100.0\%}{100.0\% + 92.90\%} \times 100\% = 51.84\%$$

$$\text{abundance of Ag-109} = \frac{92.90\%}{100.0\% + 92.90\%} \times 100\% = 48.16\%$$

Then we calculate the atomic mass of silver as usual.

$$\begin{aligned} \text{Ag atomic mass} &= 0.5184(106.905 \text{ amu}) + 0.4816(108.904 \text{ amu}) \\ &= 55.4195 \text{ amu} + 52.4482 \text{ amu} = 107.8677 = 107.87 \text{ amu} \end{aligned}$$

We can also use mass spectrometry on molecules. Because molecules often fragment (break apart) during ionization, the mass spectrum of a molecule usually contains many peaks representing the masses of different parts of the molecule, as well as a peak representing the mass of the molecule as a whole. The fragments that form upon ionization, and therefore the corresponding peaks that appear in the mass spectrum, are specific to the molecule, so that a mass spectrum is like a molecular fingerprint. Mass spectroscopy can be used to identify an unknown molecule and to determine how much of it is present in a particular sample.

Since the early 1990s, researchers have successfully applied mass spectrometry to biological molecules, including proteins (the workhorse molecules in cells) and nucleic acids (the molecules that carry genetic information). For a long time, these molecules could not be analyzed by mass spectrometry because they were difficult to vaporize and ionize without destroying them, but modern techniques

have overcome this problem. A tumor, for example, can now be instantly analyzed by mass spectrometry to determine whether it contains specific proteins associated with cancer.

1.10 Atoms and the Mole: How Many Particles?

My 7-year-old sometimes asks, “How much eggs did the chickens lay?” or “How much pancakes do I get?” My wife immediately corrects him, “Do you mean how *many* eggs?” The difference between “how many” and “how much” depends on what you are specifying. If you are specifying something countable, such as eggs or pancakes, you say “how many.” But if you are specifying something noncountable, such as water or milk, you say “how much.”

Although samples of matter may seem noncountable—we normally say how *much* water—we know that *all matter is ultimately particulate and countable*. Even more importantly, when samples of matter interact with one another, they interact *particle by particle*. For example, when hydrogen and oxygen combine to form water, two hydrogen atoms combine with one oxygen atom to form one water molecule. Therefore, as chemists, we often ask of a sample of matter, not only *how much*, but also *how many*—how many particles does the sample contain?

The particles that compose matter are far too small to count by any ordinary means. Even if we could somehow count atoms, and counted them 24 hours a day for as long as we lived, we would barely begin to count the number of atoms in something as small as a grain of sand. Therefore, if we want to know the number of atoms in anything of ordinary size, we must count them by weighing.

As an analogy, consider buying shrimp at your local fish market. Shrimp is normally sold by count, which indicates the number of shrimp per pound. For example, for 41–50 count shrimp there are between 41 and 50 shrimp per pound. The smaller the count, the larger the shrimp. Big tiger prawns have counts as low as 10–15, which means that each shrimp can weigh up to 1/10 of a pound. One advantage of categorizing shrimp this way is that we can count the shrimp by weighing them. For example, two pounds of 41–50 count shrimp contain between 82 and 100 shrimp. A similar concept exists for the particles that compose matter. We can determine the number of particles in a sample of matter from the mass of the sample.

The Mole: A Chemist’s “Dozen”

When we count large numbers of objects, we use units such as a dozen (12 objects) or a gross (144 objects) to organize our counting and to keep our numbers more manageable. With atoms, quadrillions of which may be in a speck of dust, we need a much larger number for this purpose. The chemist’s “dozen” is the **mole** (abbreviated mol). A mole is the *amount* of material containing 6.02214×10^{23} particles.

$$1 \text{ mol} = 6.02214 \times 10^{23} \text{ particles}$$

This number is **Avogadro’s number**, named after Italian physicist Amedeo Avogadro (1776–1856), and is a convenient number to use when working with atoms, molecules, and ions. In this book, we usually round Avogadro’s number to four significant figures or 6.022×10^{23} . Notice that the definition of the mole is an *amount* of a substance. We will often refer to the number of moles of substance as the *amount* of the substance.

The first thing to understand about the mole is that it can specify Avogadro’s number of anything. For example, 1 mol of marbles corresponds to 6.022×10^{23} marbles, and 1 mol of sand grains corresponds to 6.022×10^{23} sand grains. *One mole of anything is 6.022×10^{23} units of that thing*. One mole of atoms, ions, or molecules, however, makes up objects of everyday sizes. Twenty-two copper pennies, for example, contain approximately 1 mol of copper atoms, and one tablespoon of water contains approximately 1 mol of water molecules.

The second, and more fundamental, thing to understand about the mole is how it gets its specific value:

The value of the mole is equal to the number of atoms in exactly 12 g of pure carbon-12
(12 g C-12 = 1 mol C-12 atoms = 6.022×10^{23} C-12 atoms).

The definition of the mole gives us a relationship between mass (grams of carbon) and number of atoms (Avogadro’s number). This relationship, as we will see shortly, allows us to count atoms by weighing them.



KEY CONCEPT VIDEO
The Mole Concept

Twenty-two copper pennies contain approximately 1 mol of copper atoms.



▲ Before 1982, when they became almost all zinc with only a copper coating, pennies were mostly copper.

One tablespoon of water contains approximately 1 mol of water molecules.



▲ One tablespoon is approximately 15 mL; one mole of water occupies 18 mL.

Converting between Number of Moles and Number of Atoms

Converting between number of moles and number of atoms is similar to converting between dozens of eggs and number of eggs. For eggs, we use the conversion factor 1 dozen eggs = 12 eggs. For atoms, we use the conversion factor 1 mol atoms = 6.022×10^{23} atoms. The conversion factors take the form:

$$\frac{1 \text{ mol atoms}}{6.022 \times 10^{23} \text{ atoms}} \text{ or } \frac{6.022 \times 10^{23} \text{ atoms}}{1 \text{ mol atoms}}$$

Example 1.5 demonstrates how to use these conversion factors in calculations.

EXAMPLE 1.5

Converting between Number of Moles and Number of Atoms

Calculate the number of copper atoms in 2.45 mol of copper.

SORT You are given the amount of copper in moles and asked to find the number of copper atoms.

STRATEGIZE Convert between number of moles and number of atoms using Avogadro's number as a conversion factor.

SOLVE Follow the conceptual plan to solve the problem. Begin with 2.45 mol Cu and multiply by Avogadro's number to get to the number of Cu atoms.

CHECK Since atoms are small, it makes sense that the answer is large. The given number of moles of copper is almost 2.5, so the number of atoms is almost 2.5 times Avogadro's number.

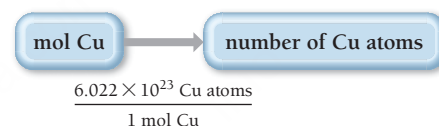
FOR PRACTICE 1.5

A pure silver ring contains 2.80×10^{22} silver atoms. How many moles of silver atoms does it contain?

GIVEN: 2.45 mol Cu

FIND: Cu atoms

CONCEPTUAL PLAN




RELATIONSHIPS USED

$$6.022 \times 10^{23} = 1 \text{ mol (Avogadro's number)}$$

SOLUTION

$$2.45 \text{ mol Cu} \times \frac{6.022 \times 10^{23} \text{ Cu atoms}}{1 \text{ mol Cu}} = 1.48 \times 10^{24} \text{ Cu atoms}$$



Same number of particles, but different masses

Converting between Mass and Amount (Number of Moles)

To count atoms by weighing them, we need one other conversion factor—the mass of 1 mol of atoms. For the isotope carbon-12, we know that the mass of 1 mol of atoms is exactly 12 g, which is numerically equivalent to carbon-12's atomic mass in atomic mass units. Since the masses of all other elements are defined relative to carbon-12, the same relationship holds for all elements. The mass of 1 mol of atoms of an element is its **molar mass**.

An element's molar mass in grams per mole is numerically equal to the element's atomic mass in atomic mass units.

For example, copper has an atomic mass of 63.55 amu and a molar mass of 63.55 g/mol. One mole of copper atoms therefore has a mass of 63.55 g. Just as the count for shrimp depends on the size of the shrimp, the mass of 1 mol of atoms depends on the element (**Figure 1.13**): 1 mol of aluminum atoms


FIGURE 1.13 Molar Mass The two dishes contain the same number of objects (12), but the masses are different because peas are less massive than marbles. Similarly, a mole of light atoms has less mass than a mole of heavier atoms.

(which are lighter than copper atoms) has a mass of 26.98 g; 1 mol of carbon atoms (which are even lighter than aluminum atoms) has a mass of 12.01 g; and 1 mol of helium atoms (lighter yet) has a mass of 4.003 g:

26.98 g aluminum = 1 mol aluminum = 6.022×10^{23} Al atoms

12.01 g carbon = 1 mol carbon = 6.022×10^{23} C atoms

4.003 g helium = 1 mol helium = 6.022×10^{23} He atoms



The lighter the atom, the less mass in 1 mol of atoms.

The molar mass of any element is the conversion factor between the mass (in grams) of that element and the amount (in moles) of that element. For carbon:

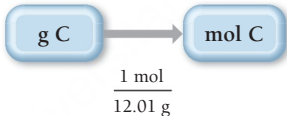
12.01 g C or $\frac{12.01 \text{ g C}}{\text{mol C}}$ or $\frac{1 \text{ mol C}}{12.01 \text{ g C}}$

Example 1.6 demonstrates how to use these conversion factors.

EXAMPLE 1.6

Converting between Mass and Amount (Number of Moles)

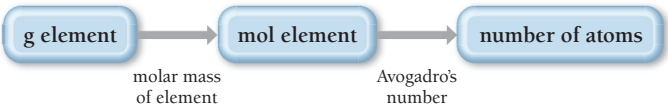
Calculate the amount of carbon (in moles) contained in a 0.0265-g pencil “lead.” (Assume that the pencil “lead” is made of pure graphite, a form of carbon.)

SORT You are given the mass of carbon and asked to find the amount of carbon in moles.	GIVEN: 0.0265 g C FIND: mol C
STRATEGIZE Convert between mass and amount (in moles) of an element using the molar mass of the element.	CONCEPTUAL PLAN  RELATIONSHIPS USED 12.01 g C = 1 mol C (carbon molar mass)
SOLVE Follow the conceptual plan to solve the problem.	SOLUTION $0.0265 \text{ g C} \times \frac{1 \text{ mol C}}{12.01 \text{ g C}} = 2.21 \times 10^{-3} \text{ mol C}$
CHECK The given mass of carbon is much less than the molar mass of carbon, so it makes sense that the answer (the amount in moles) is much less than 1 mol of carbon.	

FOR PRACTICE 1.6
Calculate the amount of copper (in moles) in a 35.8-g pure copper sheet.

FOR MORE PRACTICE 1.6
Calculate the mass (in grams) of 0.473 mol of titanium.

We now have all the tools to count the number of atoms in a sample of an element by weighing it. First, we obtain the mass of the sample. Then we convert it to the amount in moles using the element’s molar mass. Finally, we convert to number of atoms using Avogadro’s number. The conceptual plan for these kinds of calculations is:



Examples 1.7 and 1.8 demonstrate these conversions.

EXAMPLE 1.7

Interactive
Worked Example
Video 1.7

PEARSON
eText
2.0

The Mole Concept—Converting between Mass and Number of Atoms

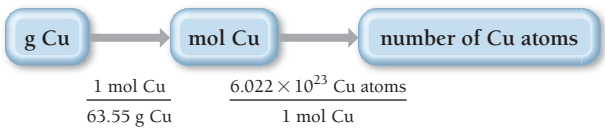
How many copper atoms are in a copper penny with a mass of 3.10 g? (Assume that the penny is composed of pure copper.)

SORT You are given the mass of copper and asked to find the number of copper atoms.

GIVEN: 3.10 g Cu
FIND: Cu atoms

STRATEGIZE Convert between the mass of an element in grams and the number of atoms of the element by first converting to moles (using the molar mass of the element) and then to number of atoms (using Avogadro's number).

CONCEPTUAL PLAN



RELATIONSHIPS USED

63.55 g Cu = 1 mol Cu (molar mass of copper)
 $6.022 \times 10^{23} = 1 \text{ mol}$ (Avogadro's number)

SOLVE Follow the conceptual plan to solve the problem. Begin with 3.10 g Cu and multiply by the appropriate conversion factors to arrive at the number of Cu atoms.

SOLUTION

$$3.10 \text{ g Cu} \times \frac{1 \text{ mol Cu}}{63.55 \text{ g Cu}} \times \frac{6.022 \times 10^{23} \text{ Cu atoms}}{1 \text{ mol Cu}} = 2.94 \times 10^{22} \text{ Cu atoms}$$

CHECK The answer (the number of copper atoms) is less than 6.022×10^{23} (one mole). This is consistent with the given mass of copper atoms, which is less than the molar mass of copper.

FOR PRACTICE 1.7

How many carbon atoms are there in a 1.3-carat diamond? Diamonds are a form of pure carbon. (1 carat = 0.20 g)

FOR MORE PRACTICE 1.7

Calculate the mass of 2.25×10^{22} tungsten atoms.

Notice that numbers with large exponents, such as 6.022×10^{23} , are almost unbelievably large. Twenty-two copper pennies contain 6.022×10^{23} or 1 mol of copper atoms, but 6.022×10^{23} pennies would cover the Earth's entire surface to a depth of 300 m. Even objects that are small by everyday standards occupy a huge space when we have a mole of them. For example, a grain of sand has a mass of less than 1 mg and a diameter less than 0.1 mm, yet 1 mol of sand grains would cover the state of Texas to a depth of several feet. For every increase of 1 in the exponent of a number, the number increases by a factor of 10, so 10^{23} is incredibly large. Of course, one mole has to be a large number if it is to have practical value because atoms are so small.

EXAMPLE 1.8

Interactive
Worked Example
Video 1.8

PEARSON
eText
2.0

The Mole Concept

An aluminum sphere contains 8.55×10^{22} aluminum atoms. What is the sphere's radius in centimeters? The density of aluminum is 2.70 g/cm^3 .

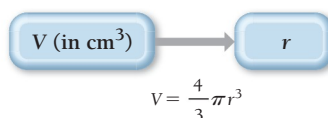
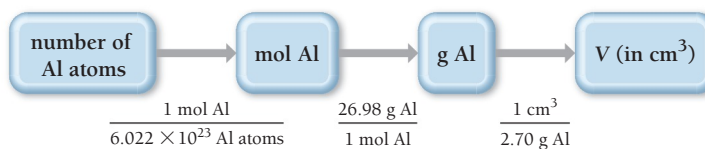
SORT You are given the number of aluminum atoms in a sphere and the density of aluminum. You are asked to find the radius of the sphere.

GIVEN: 8.55×10^{22} Al atoms
 $d = 2.70 \text{ g/cm}^3$
FIND: radius (r) of sphere

STRATEGIZE The heart of this problem is density, which relates mass to volume, and though you aren't given the mass directly, you are given the number of atoms, which you can use to find mass.

1. Convert from number of atoms to number of moles using Avogadro's number as a conversion factor.
2. Convert from number of moles to mass using molar mass as a conversion factor.
3. Convert from mass to volume (in cm^3) using density as a conversion factor.
4. Once you calculate the volume, find the radius from the volume using the formula for the volume of a sphere.

CONCEPTUAL PLAN



RELATIONSHIPS AND EQUATIONS USED

$$6.022 \times 10^{23} = 1 \text{ mol (Avogadro's number)}$$

$$26.98 \text{ g Al} = 1 \text{ mol Al (molar mass of aluminum)}$$

$$2.70 \text{ g/cm}^3 \text{ (density of aluminum)}$$

$$V = \frac{4}{3}\pi r^3 \text{ (volume of sphere)}$$

SOLVE Finally, follow the conceptual plan to solve the problem. Begin with 8.55×10^{22} Al atoms and multiply by the appropriate conversion factors to arrive at volume in cm^3 .

Then solve the equation for the volume of a sphere for r and substitute the volume to calculate r .

SOLUTION

$$8.55 \times 10^{22} \text{ Al atoms} \times \frac{1 \text{ mol Al}}{6.022 \times 10^{23} \text{ Al atoms}} \times \frac{26.98 \text{ g Al}}{1 \text{ mol Al}} \times \frac{1 \text{ cm}^3}{2.70 \text{ g Al}} = 1.4187 \text{ cm}^3$$

$$V = \frac{4}{3}\pi r^3$$

$$r = \sqrt[3]{\frac{3V}{4\pi}} = \sqrt[3]{\frac{3(1.4187 \text{ cm}^3)}{4\pi}} = 0.697 \text{ cm}$$

CHECK The units of the answer (cm) are correct. The magnitude cannot be estimated accurately, but a radius of about one-half of a centimeter is reasonable for just over one-tenth of a mole of aluminum atoms.

FOR PRACTICE 1.8

A titanium cube contains 2.86×10^{23} atoms. What is the edge length of the cube? The density of titanium is 4.50 g/cm^3 .

FOR MORE PRACTICE 1.8

Find the number of atoms in a copper rod with a length of 9.85 cm and a radius of 1.05 cm. The density of copper is 8.96 g/cm^3 .

The Mole

1.9
Cc

Conceptual
Connection



Without doing any calculations, determine which sample contains the most atoms.

- (a) a 1-g sample of copper
- (b) a 1-g sample of carbon
- (c) a 10-g sample of uranium



▲ Stars are born in nebulae such as the Eagle Nebula (also known as M16). This image, taken by the Hubble Space Telescope, shows a gaseous pillar in a star-forming region of the Eagle Nebula.

1.11 The Origins of Atoms and Elements

We have just discussed the elements and their isotopes. Where did these elements come from? The story of element formation is as old as the universe itself, and we have to go back to the very beginning to tell the story.

The birth of the universe is described by the Big Bang Theory, which asserts that the universe began as a hot, dense collection of matter and energy that expanded rapidly. As it expanded, it cooled, and within the first several hours, subatomic particles formed the first atomic nuclei: hydrogen and helium. These two elements were (and still are) the most abundant in the universe. As the universe continued expanding, some of the hydrogen and helium clumped together under the influence of gravity to form nebulae (clouds of gas) that eventually gave birth to stars and galaxies. These stars and galaxies became the nurseries where all other elements formed.

Nuclear fusion, which we discuss in more detail in Chapter 20, fuels stars. Under the conditions within the core of a star, hydrogen nuclei can combine (or fuse) to form helium. Fusion gives off enormous quantities of energy, which is why stars emit so much heat and light. The fusion of hydrogen to helium can fuel a star for billions of years.

After it burns through large quantities of hydrogen, if a star is large enough, the helium that builds up in its core can in turn fuse to form carbon. The carbon then builds up in the core and (again, if the star is large enough) can fuse to form even heavier elements. The fusion process ends with iron, which has a highly stable nucleus. By the time iron forms, however, the star is near the end of its existence and may enter a phase of expansion, transforming into a supernova. Within a supernova, which is in essence a large exploding star, a shower of neutrons allows the lighter elements (which formed during the lifetime of the star through the fusion processes just described) to capture extra neutrons. These neutrons can transform into protons (through processes that we discuss in Chapter 20), contributing ultimately to the formation of elements heavier than iron, all the way up to uranium. As the supernova continues to expand, the elements present within it are blown out into space, where they can incorporate into other nebulae and perhaps even eventually form planets that orbit stars like our own sun.

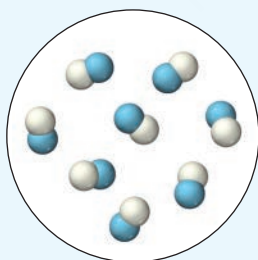
SELF-ASSESSMENT

QUIZ

The eText 2.0 icon indicates that this feature is embedded and interactive in the eText.



- This image represents a particulate view of a sample of matter. Classify the sample according to its composition.
 - The sample is a pure element.
 - The sample is a homogeneous mixture.
 - The sample is a compound.
 - The sample is a heterogeneous mixture.



- A chemist mixes sodium with water and witnesses a violent reaction between the two substances. This is best classified as a(n):
 - observation
 - law
 - hypothesis
 - theory
- Two samples of a compound containing elements A and B are decomposed. The first sample produces 15 g A and 35 g B. The second sample produces 25 g of A and what mass of B?
 - 11 g B
 - 58 g B
 - 21 g B
 - 45 g B
- A compound containing only carbon and hydrogen has a carbon-to-hydrogen mass ratio of 11.89. Which carbon-to-hydrogen mass ratio is possible for another compound composed only of carbon and hydrogen?
 - 2.50
 - 3.97
 - 4.66
 - 7.89
- Which concept was demonstrated by Rutherford's gold foil experiment?
 - Atoms contain protons and neutrons.
 - Matter is composed of atoms.
 - Elements have isotopes.
 - Atoms are mostly empty space.

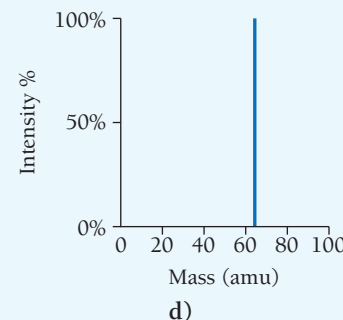
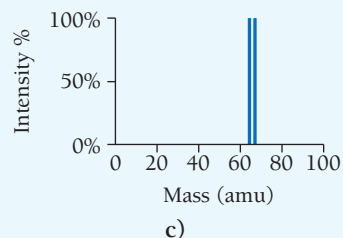
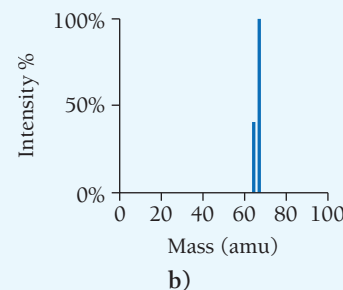
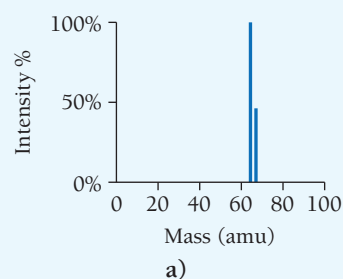
6. A student re-creates Millikan's oil drop experiment and tabulates the relative charges of the oil drops in terms of a constant, α .

Drop #1	α
Drop #2	$\frac{3}{2}\alpha$
Drop #3	$\frac{5}{2}\alpha$
Drop #4	3α

Which charge for the electron (in terms of e) is consistent with these data?

- a) $\frac{1}{2}\alpha$ b) α c) $\frac{3}{2}\alpha$ d) 2α
7. How many protons and neutrons are in the isotope Fe-58?
- a) 26 protons and 58 neutrons
b) 32 protons and 26 neutrons
c) 26 protons and 32 neutrons
d) 58 protons and 58 neutrons
8. An isotope of an element contains 82 protons and 122 neutrons. What is the symbol for the isotope?
- a) $^{204}_{82}\text{Pb}$ b) $^{122}_{82}\text{Pb}$
c) $^{122}_{40}\text{Zr}$ d) $^{204}_{40}\text{Zr}$
9. How many electrons are in the Cr^{3+} ion?
- a) 24 electrons b) 27 electrons
c) 3 electrons d) 21 electrons
10. A naturally occurring sample of an element contains only two isotopes. The first isotope has a mass of 68.9255 amu and a natural abundance of 60.11%. The second isotope has a mass of 70.9247 amu. Determine the atomic mass of the element.
- a) 70.13 amu b) 69.72 amu
c) 84.06 amu d) 69.93 amu
11. Copper has an atomic mass of 63.55 amu and two naturally occurring isotopes with masses 62.94 amu and 64.93 amu.

Which mass spectrum is most likely to correspond to a naturally occurring sample of copper?



12. Which sample contains the greatest number of atoms?
- a) 14 g C b) 49 g Cr c) 102 g Ag d) 202 g Pb
13. A solid copper cube contains 4.3×10^{23} atoms. What is the edge length of the cube? The density of copper is 8.96 g/cm^3 .
- a) 0.20 cm b) 1.7 cm c) 8.0 cm d) $6.4 \times 10^{23} \text{ cm}$
14. Determine the number of atoms in 1.85 mL of mercury. The density of mercury is 13.5 g/mL .
- a) 3.02×10^{27} atoms b) 4.11×10^{20} atoms
c) 7.50×10^{22} atoms d) 1.50×10^{25} atoms
15. A 20.0-g sample of an element contains 4.95×10^{23} atoms. Identify the element.
- a) Cr b) O c) Mg d) Fe

Answers: 1. c; 2. a; 3. b; 4. b; 5. d; 6. a; 7. c; 8. a; 9. d; 10. b; 11. a; 12. a; 13. b; 14. c; 15. c

CHAPTER SUMMARY

REVIEW

MasteringChemistry™ provides end-of-chapter exercises, feedback-enriched tutorial problems, animations, and interactive activities to encourage problem solving practice and deeper understanding of key concepts and topics.

KEY LEARNING OUTCOMES

CHAPTER OBJECTIVES	ASSESSMENT
Classify Matter by State and Composition (1.2)	• Exercises 35–42
Distinguish between Laws and Theories (1.3)	• Exercises 43, 44
Apply the Law of Definite Proportions (1.5)	• Example 1.1 For Practice 1.1 Exercises 49–52
Apply the Law of Multiple Proportions (1.5)	• Example 1.2 For Practice 1.2 Exercises 53–56

Work with Atomic Numbers, Mass Numbers, and Isotope Symbols (1.8)	• Example 1.3 For Practice 1.3 Exercises 65–72
Calculate Atomic Mass (1.9)	• Example 1.4 For Practice 1.4 Exercises 73, 74, 77, 78, 81, 82
Convert between Moles and Number of Atoms (1.10)	• Example 1.5 For Practice 1.5 Exercises 83, 84
Convert between Mass and Amount (Number of Moles) (1.10)	• Example 1.6 For Practice 1.6 For More Practice 1.6 Exercises 85, 86
Use the Mole Concept (1.10)	• Examples 1.7, 1.8 For Practice 1.7, 1.8 For More Practice 1.7, 1.8 Exercises 87–96

KEY TERMS

Section 1.1 matter (36) atom (36) molecule (36) chemistry (36)	heterogeneous mixture (39) homogeneous mixture (39)	Section 1.6 cathode ray (45) cathode ray tube (45) electrical charge (46) electron (46)	chemical symbol (52) isotope (52) natural abundance (52) mass number (A) (52) ion (54) cation (54) anion (54)
Section 1.2 substance (37) state (37) composition (37) solid (37) liquid (37) gas (37) pure substance (39) mixture (39) element (39) compound (39)	Section 1.3 hypothesis (40) experiment (40) scientific law (40) law of conservation of mass (40) theory (40)	Section 1.7 radioactivity (48) nuclear theory (49) nucleus (49) proton (49) neutron (49)	Section 1.9 atomic mass (54) mass spectrometry (55)
	Section 1.5 chemical reaction (42) law of definite proportions (43) law of multiple proportions (44) atomic theory (45)	Section 1.8 atomic mass unit (amu) (50) atomic number (Z) (50) periodic table (50)	Section 1.10 mole (mol) (57) Avogadro’s number (57) molar mass (58)

KEY CONCEPTS

Matter Is Particulate (1.1)

- All matter is composed of particles.
- The structure of the particles that compose matter determines the properties of matter.
- Chemistry is the science that investigates the properties of matter by examining the atoms and molecules that compose it.

Classifying Matter Based on the Particles That Compose It (1.2)

- We classify matter according to its state (which depends on the relative positions of interactions between particles) or according to its composition (which depends on the type of particles).
- Matter has three common states: solid, liquid, and gas.
- Matter can be a pure substance (one type of particle) or a mixture (more than one type of particle).
- A pure substance can either be an element, which cannot be chemically broken down into simpler substances, or a compound, which is composed of two or more elements in fixed proportions.
- A mixture can be either homogeneous, with the same composition throughout, or heterogeneous, with different compositions in different regions.

The Scientific Approach to Knowledge (1.3)

- Science begins with the observation of the physical world. A number of related observations can often be summarized in a statement or generalization called a scientific law.

- A hypothesis is a tentative interpretation or explanation of observations. One or more well-established hypotheses may prompt the development of a scientific theory, a model for nature that explains the underlying reasons for observations and laws.
- Laws, hypotheses, and theories all give rise to predictions that can be tested by experiments, carefully controlled procedures designed to produce critical new observations. If scientists cannot confirm the predictions, they must modify or replace the law, hypothesis, or theory.

Atomic Theory (1.5)

- Each element is composed of indestructible particles called atoms.
- All atoms of a given element have the same mass and other properties.
- Atoms combine in simple, whole-number ratios to form compounds.
- Atoms of one element cannot change into atoms of another element. In a chemical reaction, atoms change the way that they are bound together with other atoms to form a new substance.

The Electron (1.6)

- J. J. Thomson discovered the electron in the late 1800s through experiments with cathode rays. He deduced that electrons are negatively charged, and he measured their charge-to-mass ratio.
- Robert Millikan measured the charge of the electron, which—in conjunction with Thomson’s results—led to calculation of the mass of an electron.

The Nuclear Atom (1.7)

- In 1909, Ernest Rutherford probed the inner structure of the atom by working with a form of radioactivity called alpha radiation and developed the nuclear theory of the atom.
- Nuclear theory states that the atom is mainly empty space, with most of its mass concentrated in a tiny region called the nucleus and most of its volume occupied by relatively light electrons.

Subatomic Particles (1.8)

- Atoms are composed of three fundamental particles: the proton (1 amu, +1 charge), the neutron (1 amu, 0 charge), and the electron (~0 amu, -1 charge).
- The number of protons in the nucleus of the atom is its atomic number (Z). The atomic number determines the charge of the nucleus and defines the element.
- The periodic table tabulates all known elements in order of increasing atomic number.
- The sum of the number of protons and neutrons is the mass number (A).

- Atoms of an element that have different numbers of neutrons (and therefore different mass numbers) are isotopes.
- Atoms that lose or gain electrons become charged and are called ions. Cations are positively charged and anions are negatively charged.

Atomic Mass (1.9)

- The atomic mass of an element, listed directly below its symbol in the periodic table, is a weighted average of the masses of the naturally occurring isotopes of the element.
- Atomic masses can be determined through mass spectrometry.

Atoms and the Mole (1.10)

- One mole of an element is the amount of that element that contains Avogadro's number (6.022×10^{23}) of atoms.
- Any sample of an element with a mass (in grams) that equals its atomic mass contains one mole of the element. For example, the atomic mass of carbon is 12.011 amu; therefore, 12.011 g of carbon contains 1 mol of carbon atoms.

KEY EQUATIONS AND RELATIONSHIPS

Relationship between Mass Number (A), Number of Protons (p), and Number of Neutrons (n) (1.8)

$$A = \text{number of protons (p)} + \text{number of neutrons (n)}$$

Atomic Mass (1.9)

$$\text{atomic mass} = \sum_n (\text{fraction of isotope } n) \times (\text{mass of isotope } n)$$

Avogadro's Number (1.10)

$$1 \text{ mol} = 6.0221421 \times 10^{23} \text{ particles}$$

EXERCISES

REVIEW QUESTIONS

1. Explain this statement in your own words and give an example. *The properties of the substances around us depend on the structure of the particles that compose them.*
2. Explain the main goal of chemistry.
3. What are two different ways to classify matter?
4. How do solids, liquids, and gases differ?
5. Explain the difference between a pure substance and a mixture based on the composite particles of each.
6. Explain the difference between an element and a compound.
7. Explain the difference between a homogeneous and a heterogeneous mixture.
8. Describe the scientific approach to knowledge. How does it differ from other approaches?
9. Explain the differences between a hypothesis, a law, and a theory.
10. What observations did Antoine Lavoisier make? What law did he formulate?
11. What theory did John Dalton formulate?
12. What is wrong with the expression, "That is just a theory," if by theory the speaker is referring to a scientific theory?
13. Summarize the history of the atomic idea. How was Dalton able to convince others to accept an idea that had been controversial for 2000 years?
14. State and explain the law of conservation of mass.
15. State and explain the law of definite proportions.
16. State and explain the law of multiple proportions. How is the law of multiple proportions different from the law of definite proportions?
17. What are the main ideas in Dalton's atomic theory? How do they help explain the laws of conservation of mass, of constant composition, and of definite proportions?
18. How and by whom was the electron discovered? What basic properties of the electron were reported with its discovery?
19. Explain Millikan's oil drop experiment and how it led to the measurement of the electron's charge. Why is the magnitude of the charge of the electron so important?
20. Describe the plum-pudding model of the atom.
21. Describe Rutherford's gold foil experiment. How did the experiment prove that the plum-pudding model of the atom was wrong?

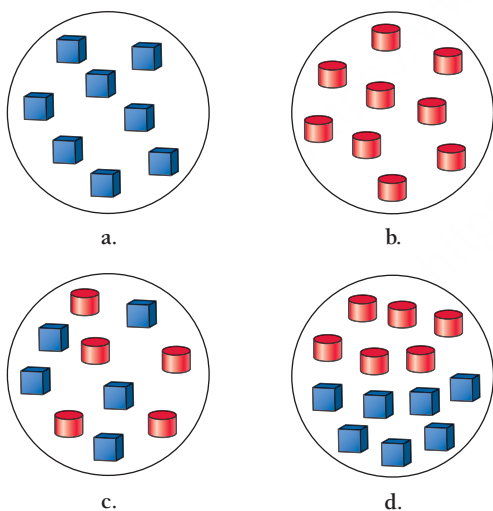
22. Describe Rutherford's nuclear model of the atom. What was revolutionary about his model?
23. If matter is mostly empty space, as suggested by Rutherford, then why does it appear so solid?
24. List the three subatomic particles that compose atoms and give the basic properties (mass and charge) of each.
25. What defines an element?
26. Explain the difference between Z (the atomic number) and A (the mass number).
27. Where do elements get their names?
28. What are isotopes? What is percent natural abundance of isotopes?
29. Describe the two different notations used to specify isotopes and give an example of each.
30. What is an ion? A cation? An anion?
31. What is atomic mass? How is it calculated?
32. Explain how a mass spectrometer works. What kind of information can be determined from a mass spectrum?
33. What is a mole? How is the mole concept useful in chemical calculations?
34. Why is the mass corresponding to a mole of one element different from the mass corresponding to a mole of another element?

PROBLEMS BY TOPIC

Note: Answers to all odd-numbered Problems, numbered in blue, can be found in Appendix III. Exercises in the Problems by Topic section are paired, with each odd-numbered problem followed by a similar even-numbered problem. Exercises in the Cumulative Problems section are also paired but more loosely. Because of their nature, Challenge Problems and Conceptual Problems are unpaired.

The Classification of Matter

35. Each shape represents a type of particle (such as an atom or a molecule). Classify each image as a pure substance, homogeneous mixture, or heterogeneous mixture.



36. Using triangles to represent one type of atom and circles to represent another type of atom, draw one image to represent a mixture of the two atoms and draw another image to represent a compound composed of the two atoms.
37. Classify each substance as a pure substance or a mixture. If it is a pure substance, classify it as an element or a compound. If it is a mixture, classify it as homogeneous or heterogeneous.
 - a. sweat
 - b. carbon dioxide
 - c. aluminum
 - d. vegetable soup
38. Classify each substance as a pure substance or a mixture. If it is a pure substance, classify it as an element or a compound. If it is a mixture, classify it as homogeneous or heterogeneous.
 - a. wine
 - b. beef stew
 - c. iron
 - d. carbon monoxide

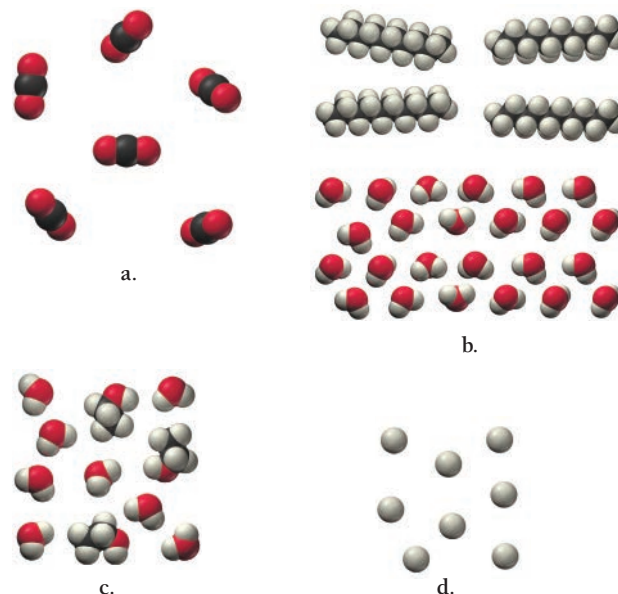
39. Complete the table.

Substance	Pure or mixture	Type
aluminum	pure	element
apple juice	_____	_____
hydrogen peroxide	_____	_____
chicken soup	_____	_____

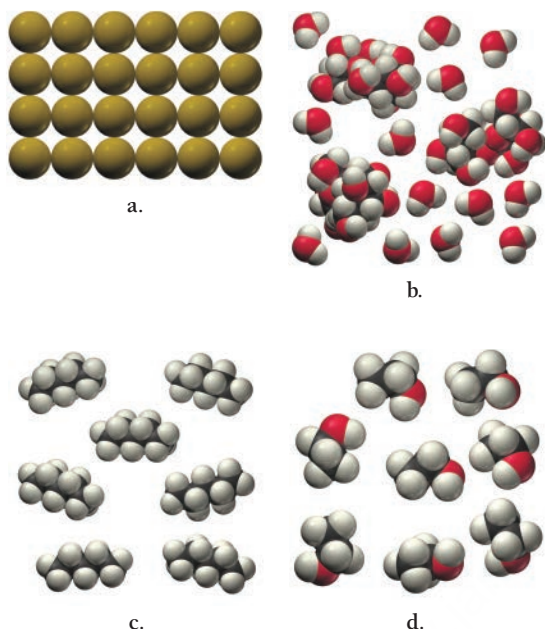
40. Complete the table.

Substance	Pure or mixture	Type
water	pure	compound
coffee	_____	_____
ice	_____	_____
carbon	_____	_____

41. Determine whether each molecular diagram represents a pure substance or a mixture. If it represents a pure substance, classify the substance as an element or a compound. If it represents a mixture, classify the mixture as homogeneous or heterogeneous.



42. Determine whether each molecular diagram represents a pure substance or a mixture. If it represents a pure substance, classify the substance as an element or a compound. If it represents a mixture, classify the mixture as homogeneous or heterogeneous.



The Scientific Approach to Knowledge

43. Classify each statement as an observation, a law, or a theory.
- All matter is made of tiny, indestructible particles called atoms.
 - When iron rusts in a closed container, the mass of the container and its contents do not change.
 - In chemical reactions, matter is neither created nor destroyed.
 - When a match burns, heat is released.
44. Classify each statement as an observation, a law, or a theory.
- Chlorine is a highly reactive gas.
 - If elements are listed in order of increasing mass of their atoms, their chemical reactivity follows a repeating pattern.
 - Neon is an inert (or nonreactive) gas.
 - The reactivity of elements depends on the arrangement of their electrons.
45. A chemist decomposes several samples of carbon monoxide into carbon and oxygen and weighs the resulting elements. The results are shown in the table.

Sample	Mass of Carbon (g)	Mass of Oxygen (g)
1	6	8
2	12	16
3	18	24

- a. Describe any pattern you notice in these results. Next, the chemist decomposes several samples of hydrogen peroxide into hydrogen and oxygen. The results are shown in the table.

Sample	Mass of Hydrogen (g)	Mass of Oxygen (g)
1	0.5	8
2	1	16
3	1.5	24

- b. Describe any similarity you notice between these results and those for carbon monoxide in part a.
- c. Can you formulate a law from the observations in a and b?
- d. Can you formulate a hypothesis that might explain your law in c?
46. When astronomers observe distant galaxies, they can tell that most of them are moving away from one another. In addition, the more distant the galaxies, the more rapidly they are likely to be moving away from each other. Can you devise an hypothesis to explain these observations?

The Laws of Conservation of Mass, Definite Proportions, and Multiple Proportions

47. A hydrogen-filled balloon is ignited and 1.50 g of hydrogen reacts with 12.0 g of oxygen. How many grams of water vapor form? (Assume that water vapor is the only product.)
48. An automobile gasoline tank holds 21 kg of gasoline. When the gasoline burns, 84 kg of oxygen is consumed, and carbon dioxide and water are produced. What is the total combined mass of carbon dioxide and water that is produced?
49. Two samples of carbon tetrachloride are decomposed into their constituent elements. One sample produces 38.9 g of carbon and 448 g of chlorine, and the other sample produces 14.8 g of carbon and 134 g of chlorine. Are these results consistent with the law of definite proportions? Show why or why not.
50. Two samples of sodium chloride are decomposed into their constituent elements. One sample produces 6.98 g of sodium and 10.7 g of chlorine, and the other sample produces 11.2 g of sodium and 17.3 g of chlorine. Are these results consistent with the law of definite proportions? Explain your answer.
51. The mass ratio of sodium to fluorine in sodium fluoride is 1.21:1. A sample of sodium fluoride produces 28.8 g of sodium upon decomposition. How much fluorine (in grams) is formed?
52. Upon decomposition, one sample of magnesium fluoride produces 1.65 kg of magnesium and 2.57 kg of fluorine. A second sample produces 1.32 kg of magnesium. How much fluorine (in grams) does the second sample produce?
53. Two different compounds containing osmium and oxygen have the following masses of oxygen per gram of osmium: 0.168 and 0.3369 g. Show that these amounts are consistent with the law of multiple proportions.
54. Palladium forms three different compounds with sulfur. The mass of sulfur per gram of palladium in each compound is listed in the accompanying table.

Compound	Grams S per Gram Pd
A	0.603
B	0.301
C	0.151

Show that these masses are consistent with the law of multiple proportions.

55. Sulfur and oxygen form both sulfur dioxide and sulfur trioxide. When samples of these are decomposed, the sulfur dioxide produces 3.49 g oxygen and 3.50 g sulfur, while the sulfur trioxide produces 6.75 g oxygen and 4.50 g sulfur. Calculate the mass of oxygen per gram of sulfur for each sample and show that these results are consistent with the law of multiple proportions.
56. Sulfur and fluorine form several different compounds including sulfur hexafluoride and sulfur tetrafluoride. Decomposition of a sample of sulfur hexafluoride produces 4.45 g of fluorine and 1.25 g of sulfur, while decomposition of a sample of sulfur tetrafluoride produces 4.43 g of fluorine and 1.87 g of sulfur. Calculate the mass of fluorine per gram of sulfur for each sample and show that these results are consistent with the law of multiple proportions.

Atomic Theory, Nuclear Theory, and Subatomic Particles

57. Which statements are *consistent* with Dalton's atomic theory as it was originally stated? Why?
- Sulfur and oxygen atoms have the same mass.
 - All cobalt atoms are identical.
 - Potassium and chlorine atoms combine in a 1:1 ratio to form potassium chloride.
 - Lead atoms can be converted into gold.
58. Which statements are *inconsistent* with Dalton's atomic theory as it was originally stated? Why?
- All carbon atoms are identical.
 - An oxygen atom combines with 1.5 hydrogen atoms to form a water molecule.
 - Two oxygen atoms combine with a carbon atom to form a carbon dioxide molecule.
 - The formation of a compound often involves the destruction of one or more atoms.
59. Which statements are *consistent* with Rutherford's nuclear theory as it was originally stated? Why?
- The volume of an atom is mostly empty space.
 - The nucleus of an atom is small compared to the size of the atom.
 - Neutral lithium atoms contain more neutrons than protons.
 - Neutral lithium atoms contain more protons than electrons.
60. Which statements are *inconsistent* with Rutherford's nuclear theory as it was originally stated? Why?
- Since electrons are smaller than protons, and since a hydrogen atom contains only one proton and one electron, it must follow that the volume of a hydrogen atom is mostly due to the proton.
 - A nitrogen atom has 7 protons in its nucleus and 7 electrons outside of its nucleus.
 - A phosphorus atom has 15 protons in its nucleus and 150 electrons outside of its nucleus.
 - The majority of the mass of a fluorine atom is due to its 9 electrons.
61. A chemist in an imaginary universe, where electrons have a different charge than they do in our universe, performs the Millikan oil drop experiment to measure the electron's charge. The charges of several drops are recorded here. What is the charge of the electron in this imaginary universe?

Drop #	Charge
A	$-6.9 \times 10^{-19} \text{ C}$
B	$-9.2 \times 10^{-19} \text{ C}$
C	$-11.5 \times 10^{-19} \text{ C}$
D	$-4.6 \times 10^{-19} \text{ C}$

62. Imagine a unit of charge called the zorg. A chemist performs the Millikan oil drop experiment and measures the charge of each drop in zorgs. Based on the results shown here, what is the charge of the electron in zorgs (z)? How many electrons are in each drop?

Drop #	Charge
A	$-4.8 \times 10^{-9} \text{ z}$
B	$-9.6 \times 10^{-9} \text{ z}$
C	$-6.4 \times 10^{-9} \text{ z}$
D	$-12.8 \times 10^{-9} \text{ z}$

63. Which statements about subatomic particles are true?
- If an atom has an equal number of protons and electrons, it will be charge-neutral.
 - Electrons are attracted to protons.
 - Electrons are much lighter than neutrons.
 - Protons have twice the mass of neutrons.
64. Which statements about subatomic particles are false?
- Protons and electrons have charges of the same magnitude but opposite sign.
 - Protons have about the same mass as neutrons.
 - Some atoms don't have any protons.
 - Protons and neutrons have charges of the same magnitude but opposite signs.

Isotopes and Ions

65. Write isotopic symbols in the form X-A (e.g., C-13) for each isotope.
- the silver isotope with 60 neutrons
 - the silver isotope with 62 neutrons
 - the uranium isotope with 146 neutrons
 - the hydrogen isotope with 1 neutron
66. Write isotopic symbols in the form ${}^A_Z\text{X}$ for each isotope.
- the copper isotope with 34 neutrons
 - the copper isotope with 36 neutrons
 - the potassium isotope with 21 neutrons
 - the argon isotope with 22 neutrons
67. Determine the number of protons and the number of neutrons in each isotope.
- ${}^{14}_7\text{N}$
 - ${}^{23}_{11}\text{Na}$
 - ${}^{222}_{86}\text{Rn}$
 - ${}^{208}_{82}\text{Pb}$
68. Determine the number of protons and the number of neutrons in each isotope.
- ${}^{40}_{19}\text{K}$
 - ${}^{226}_{88}\text{Ra}$
 - ${}^{99}_{43}\text{Tc}$
 - ${}^{33}_{15}\text{P}$

69. The amount of carbon-14 in ancient artifacts and fossils is often used to establish their age. Determine the number of protons and the number of neutrons in a carbon-14 isotope and write its symbol in the form ${}_Z^AX$.
70. Uranium-235 is used in nuclear fission. Determine the number of protons and the number of neutrons in uranium-235 and write its symbol in the form ${}_Z^AX$.
71. Determine the number of protons and the number of electrons in each ion.
a. Ni^{2+} b. S^{2-} c. Br^- d. Cr^{3+}
72. Determine the number of protons and the number of electrons in each ion.
a. Al^{3+} b. Se^{2-} c. Ga^{3+} d. Sr^{2+}

Atomic Mass and Mass Spectrometry

73. Gallium has two naturally occurring isotopes with the following masses and natural abundances:

Isotope	Mass (amu)	Abundance (%)
Ga-69	68.92558	60.108
Ga-71	70.92470	39.892

Sketch the mass spectrum of gallium.

74. Magnesium has three naturally occurring isotopes with the following masses and natural abundances:

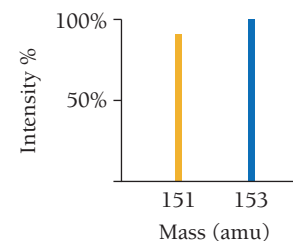
Isotope	Mass (amu)	Abundance (%)
Mg-24	23.9850	78.99
Mg-25	24.9858	10.00
Mg-26	25.9826	11.01

Sketch the mass spectrum of magnesium.

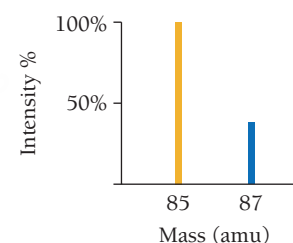
75. The atomic mass of fluorine is 18.998 amu, and its mass spectrum shows a large peak at this mass. The atomic mass of chlorine is 35.45 amu, yet the mass spectrum of chlorine does not show a peak at this mass. Explain the difference.
76. The atomic mass of copper is 63.546 amu. Do any copper isotopes have a mass of 63.546 amu? Explain.
77. An element has two naturally occurring isotopes. Isotope 1 has a mass of 120.9038 amu and a relative abundance of 57.4%, and isotope 2 has a mass of 122.9042 amu. Find the atomic mass of this element and identify it.
78. An element has four naturally occurring isotopes with the masses and natural abundances given here. Find the atomic mass of the element and identify it.

Isotope	Mass (amu)	Abundance (%)
1	135.90714	0.19
2	137.90599	0.25
3	139.90543	88.43
4	141.90924	11.13

79. Bromine has two naturally occurring isotopes (Br-79 and Br-81) and an atomic mass of 79.904 amu. The mass of Br-81 is 80.9163 amu, and its natural abundance is 49.31%. Calculate the mass and natural abundance of Br-79.
80. Silicon has three naturally occurring isotopes (Si-28, Si-29, and Si-30). The mass and natural abundance of Si-28 are 27.9769 amu and 92.2%, respectively. The mass and natural abundance of Si-29 are 28.9765 amu and 4.67%, respectively. Find the mass and natural abundance of Si-30.
81. Use the mass spectrum of europium shown here to determine the atomic mass of europium.




82. Use the mass spectrum of rubidium shown here to determine the atomic mass of rubidium.



The Mole Concept

83. How many sulfur atoms are there in 5.52 mol of sulfur?
84. How many moles of aluminum do 3.7×10^{24} aluminum atoms represent?
85. What is the amount, in moles, of each elemental sample?
a. 11.8 g Ar
b. 3.55 g Zn
c. 26.1 g Ta
d. 0.211 g Li
86. What is the mass, in grams, of each elemental sample?
a. 2.3×10^3 mol Sb
b. 0.0355 mol Ba
c. 43.9 mol Xe
d. 1.3 mol W
87. How many silver atoms are there in 3.78 g of silver?
88. What is the mass of 4.91×10^{21} platinum atoms?
89. Calculate the number of atoms in each sample.
a. 5.18 g P
b. 2.26 g Hg
c. 1.87 g Bi
d. 0.082 g Sr

90. Calculate the number of atoms in each sample.
- 14.955 g Cr
 - 39.733 g S
 - 12.899 g Pt
 - 97.552 g Sn
91. Calculate the mass, in grams, of each sample.
- 1.1×10^{23} gold atoms
 - 2.82×10^{22} helium atoms
 - 1.8×10^{23} lead atoms
 - 7.9×10^{21} uranium atoms
92. Calculate the mass, in kg, of each sample.
- 7.55×10^{26} cadmium atoms
 - 8.15×10^{27} nickel atoms
 - 1.22×10^{27} manganese atoms
 - 5.48×10^{29} lithium atoms
93. How many carbon atoms are there in a diamond (pure carbon) with a mass of 52 mg?
94. How many helium atoms are there in a helium blimp containing 536 kg of helium?
95. Calculate the average mass, in grams, of one platinum atom.
96. Using scanning tunneling microscopy, scientists at IBM wrote the initials of their company with 35 individual xenon atoms (as shown below). Calculate the total mass of these letters in grams.




CUMULATIVE PROBLEMS

97. A 7.83-g sample of HCN contains 0.290 g of H and 4.06 g of N. Find the mass of carbon in a sample of HCN with a mass of 3.37 g.
98. The ratio of sulfur to oxygen by mass in SO_2 is 1.0:1.0.
- Find the ratio of sulfur to oxygen by mass in SO_3 .
 - Find the ratio of sulfur to oxygen by mass in S_2O .
99. Use the mass spectrum of lead shown here to estimate the atomic mass of lead. Estimate the mass and percent intensity values from the graph to three significant figures.
-
- | Mass (amu) | Intensity (%) |
|------------|---------------|
| 204 | ~1 |
| 206 | ~48 |
| 207 | ~42 |
| 208 | 100 |
100. Use the mass spectrum of mercury shown here to estimate the atomic mass of mercury. Estimate the masses and percent intensity values from the graph to three significant figures.
-
- | Mass (amu) | Intensity (%) |
|------------|---------------|
| 196 | ~1 |
| 198 | ~35 |
| 199 | ~55 |
| 200 | ~75 |
| 201 | ~35 |
| 202 | 100 |
101. Nuclei with the same number of *neutrons* but different mass numbers are called *isotones*. Write the symbols of four isotones of ^{236}Th .
102. Fill in the blanks to complete the table.
- | Symbol | Z | A | Number of p^+ | Number of e^- | Number of n | Charge |
|------------------|----|----|-----------------|-----------------|-------------|--------|
| Si | 14 | — | — | 14 | 14 | — |
| S^{2-} | — | 32 | — | — | — | 2- |
| Cu^{2+} | — | — | — | — | 34 | 2+ |
| — | 15 | — | — | 15 | 16 | — |
103. A penny has a thickness of approximately 1.0 mm. If you stacked Avogadro's number of pennies one on top of the other on Earth's surface, how far would the stack extend (in km)? For comparison, the sun is about 150 million km from Earth and the nearest star, Proxima Centauri, is about 40 trillion km from Earth.
104. Consider the stack of pennies in Problem 103. How much money (in dollars) would this represent? If this money were equally distributed among the world's population of 6.5 billion people, how much would each person receive? Would each person be a millionaire? A billionaire? A trillionaire?
105. A pure copper sphere has a radius of 0.935 in. How many copper atoms does it contain? The volume of a sphere is $(4/3)\pi r^3$, and the density of copper is 8.96 g/cm^3 .
106. A pure titanium cube has an edge length of 2.78 in. How many titanium atoms does it contain? Titanium has a density of 4.50 g/cm^3 .
107. A 67.2-g sample of a gold and palladium alloy contains 2.49×10^{23} atoms. What is the composition (by mass) of the alloy?
108. Common brass is a copper and zinc alloy containing 37.0% zinc by mass and having a density of 8.48 g/cm^3 . A fitting composed of common brass has a total volume of 112.5 cm^3 . How many atoms (copper and zinc) does the fitting contain?
109. The U.S. Environmental Protection Agency (EPA) sets limits on healthful levels of air pollutants. The maximum level that the EPA considers safe for lead air pollution is $1.5 \mu\text{g/m}^3$. If your lungs were filled with air containing this level of lead, how many lead atoms would be in your lungs? (Assume a total lung volume of 5.50 L.)
110. Pure gold is usually too soft for jewelry, so it is often alloyed with other metals. How many gold atoms are in a 0.255-ounce 18 K gold bracelet? (18 K gold is 75% gold by mass.)

CHALLENGE PROBLEMS

111. Silver is composed of two naturally occurring isotopes: Ag-107 (51.839%) and Ag-109. The ratio of the masses of the two isotopes is 1.0187. What is the mass of Ag-107?
112. To the right is a representation of 50 atoms of a fictitious element called westmontium (Wt). The red spheres represent Wt-296, the blue spheres Wt-297, and the green spheres Wt-298.
- Assuming that the sample is statistically representative of a naturally occurring sample, calculate the percent natural abundance of each Wt isotope.
 - Draw the mass spectrum for a naturally occurring sample of Wt.
 - The mass of each Wt isotope is measured relative to C-12 and tabulated here. Use the mass of C-12 to convert each of the masses to amu and calculate the atomic mass of Wt.



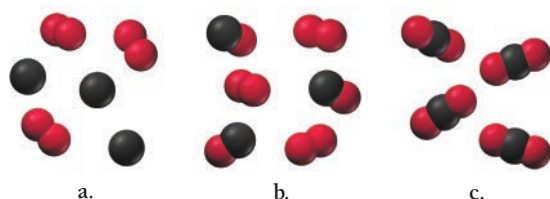

Isotope	Mass
Wt-296	$24.6630 \times \text{Mass}(^{12}\text{C})$
Wt-297	$24.7490 \times \text{Mass}(^{12}\text{C})$
Wt-298	$24.8312 \times \text{Mass}(^{12}\text{C})$

113. The ratio of oxygen to nitrogen by mass in NO_2 is 2.29. The ratio of fluorine to nitrogen by mass in NF_3 is 4.07. Find the ratio of oxygen to fluorine by mass in OF_2 .
114. Naturally occurring cobalt consists of only one isotope, ^{59}Co , whose relative atomic mass is 58.9332. A synthetic radioactive isotope of cobalt, ^{60}Co , relative atomic mass 59.9338, is used in radiation therapy for cancer. A 1.5886-g sample of cobalt has an apparent "atomic mass" of 58.9901. Find the mass of ^{60}Co in this sample.

115. A 7.36-g sample of copper is contaminated with an additional 0.51 g of zinc. Suppose an atomic mass measurement is performed on this sample. What would be the apparent measured atomic mass?
116. The ratio of the mass of O to the mass of N in N_2O_3 is 12:7. Another binary compound of nitrogen has a ratio of O to N of 16:7. What is its formula? What is the ratio of O to N in the next member of this series of compounds?
117. Naturally occurring magnesium has an atomic mass of 24.312 and consists of three isotopes. The major isotope is ^{24}Mg , natural abundance 78.99%, relative atomic mass 23.98504. The next most abundant isotope is ^{26}Mg , relative atomic mass 25.98259. The third most abundant isotope is ^{25}Mg whose natural abundance is in the ratio of 0.9083 to that of ^{26}Mg . Find the relative atomic mass of ^{25}Mg .
118. In Section 1.10, it was stated that 1 mol of sand grains would cover the state of Texas to several feet. Estimate how many feet by assuming that the sand grains are roughly cube-shaped, each one with an edge length of 0.10 mm. Texas has a land area of 268,601 sq mi.
119. Use the concepts in this chapter to obtain an estimate for the number of atoms in the universe. Make the following assumptions: (a) All of the atoms in the universe are hydrogen atoms in stars. (This is not a ridiculous assumption because over three-fourths of the atoms in the universe are in fact hydrogen. Gas and dust between the stars represent only about 15% of the visible matter of our galaxy, and planets compose a far smaller fraction.) (b) The sun is a typical star composed of pure hydrogen with a density of 1.4 g/cm^3 and a radius of $7 \times 10^8 \text{ m}$. (c) Each of the roughly 100 billion stars in the Milky Way galaxy contains the same number of atoms as our sun. (d) Each of the 10 billion galaxies in the visible universe contains the same number of atoms as our Milky Way galaxy.

CONCEPTUAL PROBLEMS

120. A volatile liquid (one that readily evaporates) is put into a jar, and the jar is then sealed. Does the mass of the sealed jar and its contents change upon the vaporization of the liquid?
121. The diagram to the right represents solid carbon dioxide, also known as dry ice. Which of the diagrams below best represents the dry ice after it has sublimed into a gas?



122. Use triangles to represent atoms of element A and circles to represent atoms of element B. Draw an atomic level view of a homogeneous mixture of elements A and B. Draw an atomic view of the compound AB in a liquid state (molecules close together). Draw an atomic view of the compound AB after it has undergone a physical change (such as evaporation). Draw an atomic view of the compound after it has undergone a chemical change (such as decomposition of AB into A and B).
123. Identify each statement as being most like an observation, a law, or a theory.
- All coastal areas experience two high tides and two low tides each day.
 - The tides in Earth's oceans are caused mainly by the gravitational attraction of the moon.
 - Yesterday, high tide in San Francisco Bay occurred at 2:43 A.M. and 3:07 P.M.
 - Tides are higher at the full moon and new moon than at other times of the month.

124. The mole is defined as the amount of a substance containing the same number of particles as exactly 12 g of C-12. The amu is defined as 1/12 of the mass of an atom of C-12. Why is it important that both of these definitions reference the same isotope? What would be the result, for example, of defining the mole with respect to C-12, but the amu with respect to Ne-20?

125. Without doing any calculations, determine which of the samples contains the greatest amount of the element in moles. Which contains the greatest mass of the element?

- 55.0 g Cr
- 45.0 g Ti
- 60.0 g Zn

QUESTIONS FOR GROUP WORK

Discuss these questions with the group and record your consensus answer.

126. Using white and black circles to represent different kinds of atoms, make a drawing that accurately represents each sample of matter: a solid element, a liquid compound, and a heterogeneous mixture. Make a drawing (clearly showing *before* and *after*) depicting your liquid compound undergoing a physical change. Make a drawing depicting your solid element undergoing a chemical change.

127. In a naturally occurring sample, 19.8% of boron atoms have 5 neutrons and 80.2% have 6 neutrons. What is the mass number of each boron isotope? Sketch a sample of 10 atoms that is nearly representative of a natural sample. What is the average mass of the atoms in your drawing? What is the atomic mass of boron? (Boron-10 has a mass of 10.01294 amu, and boron-11 has a mass of 11.00931 amu.)

Active Classroom Learning

128. In complete sentences, describe the similarities and differences between:

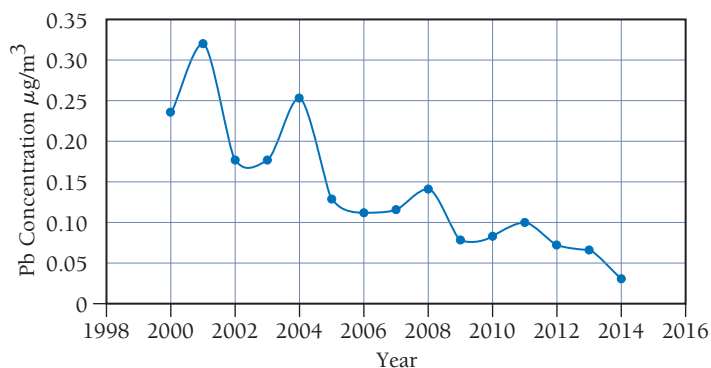
- different isotopes of an element
- a neutral atom and an ion of the same element

129. Calculate the mass in grams of one mole of each of the following (the mass of a single item is given in parentheses): electrons (9.10938×10^{-28} g), protons (1.67262×10^{-24} g), neutrons (1.67493×10^{-24} g), atoms of carbon-12 (1.992646×10^{-23} g), and doughnuts (74 g). Compare the mass of one mole of carbon-12 atoms to the sum of the masses of the particles that it contains. If the doughnut mentioned in this question were made entirely of carbon, how many atoms would it contain?

DATA INTERPRETATION AND ANALYSIS

130. The U.S. Environmental Protection Agency (U.S. EPA) monitors air quality in the United States. Lead is among the pollutants regularly monitored and regulated. Lead is released into the atmosphere primarily by the processing of metals ores containing lead and by lead-based battery manufacturing. The effects of too much exposure to lead include neurological damage and cardiovascular disease. Because of the Clean Air Act and its amendments, the amounts of lead in air have been decreasing for many years. The chart below shows the lead concentration in air in the United States from 2000 to 2014. Examine the data and answer the questions below.

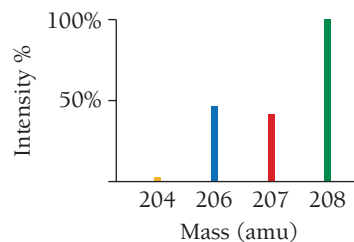
Lead Concentration in Air in U.S.



- Determine the lead concentrations in 2000 and in 2014.
- Calculate the percent change in lead concentration that occurred from 2000 to 2014. *Hint:* Calculate the percent change with the following equation:

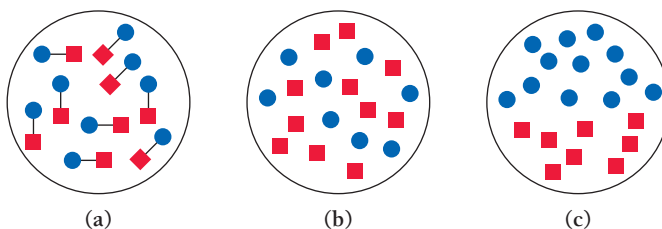
$$\text{percent change} = \frac{(\text{final concentration} - \text{initial concentration})}{\text{initial concentration}} \times 100\%$$

- How many lead atoms were in one cubic centimeter of air in 2011?
- Examine the mass spectrum for lead shown below. How many Pb-206 atoms were in one cubic centimeter of air in 2011?



ANSWERS TO CONCEPTUAL CONNECTIONS

Cc 1.1



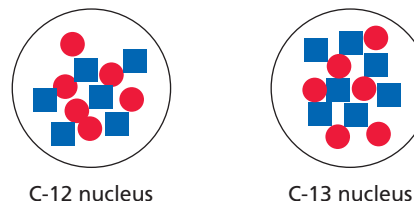
Cc 1.2 (b) A law only summarizes a series of related observations, whereas a theory gives the underlying reasons for them.

Cc 1.3 Most of the matter that composed the log reacts with oxygen molecules in the air. The products of the reaction (mostly carbon dioxide and water) are released as gases into the air.

Cc 1.4 The law of definite proportions applies to two or more samples of the *same compound* and states that the ratio of one element to the other is always the same. The law of multiple proportions applies to two *different compounds* containing the same two elements (A and B) and states that the masses of B that combine with 1 g of A are always related to each other as a small whole-number ratio.

Cc 1.5 The drop contains three excess electrons
 $(3 \times (-1.6 \times 10^{-19} \text{ C}) = -4.8 \times 10^{-19} \text{ C})$.

Cc 1.6



A 10,000-atom sample of carbon, on average, contains 107 C-13 atoms.

Cc 1.7 (b) The number of neutrons in the nucleus of an atom does not affect the atom's size because the nucleus is miniscule compared to the atom itself.

Cc 1.8 (a) Since 98.93% of the atoms are C-12, we would expect the atomic mass to be very close to the mass of the C-12 isotope.

Cc 1.9 (b) 1 g carbon contains the greatest number of atoms.

- 2.1** Schrödinger's Cat 75
- 2.2** The Nature of Light 76
- 2.3** Atomic Spectroscopy and the Bohr Model 85
- 2.4** The Wave Nature of Matter: The de Broglie Wavelength, the Uncertainty Principle, and Indeterminacy 88

- 2.5** Quantum Mechanics and the Atom 93
- 2.6** The Shapes of Atomic Orbitals 99
- Key Learning Outcomes** 105



The thought experiment known as Schrödinger's cat is intended to show that the strangeness of the quantum world does not transfer to the macroscopic world.

CHAPTER

2

The Quantum-Mechanical Model of the Atom

THE EARLY TWENTIETH CENTURY revolutionized how we think about physical reality.

Before that time, all descriptions of matter had been deterministic—the present completely determining the future. Quantum mechanics changed that. This new theory suggested that for subatomic particles—electrons, neutrons, and protons—the present does NOT completely determine the future. For example, if you shoot one electron down a path and measure where it lands, a second electron shot down the same path under the same conditions will most likely land in a different place! Several gifted scientists, such as Albert Einstein, Niels Bohr, Louis de Broglie, Max Planck, Werner Heisenberg, P. A. M. Dirac, and Erwin Schrödinger, developed quantum-mechanical theory. Their new theory, however, made even some of them uncomfortable. Bohr said, “I should be sorry I ever got involved with quantum theory.” Schrödinger wrote, “I don’t like it, and I’m sorry I ever had anything to do with it.” Albert Einstein disbelieved it stating, “God does not play dice with the universe.” In fact, Einstein attempted to disprove quantum mechanics—without success—until he died. Today, quantum mechanics forms the foundation of chemistry—explaining the periodic table and the behavior of the elements in chemical bonding.

**“I should be sorry I ever got involved
with quantum theory.”**

—Erwin Schrödinger (1887–1961)

2.1 Schrödinger’s Cat

Atoms and the particles that compose them are unimaginably small. Electrons have a mass of less than a trillionth of a trillionth of a gram, and a size so small that it is immeasurable. A single speck of dust contains more electrons than the number of people who have existed on Earth over all the centuries of time. Electrons are *small* in the absolute sense of the word—they are among the smallest particles that make up matter. Nonetheless, if we are to understand the main theme of this book—how the structure of the particles that compose matter determines the properties of matter—we must understand electrons. As we saw in Section 1.7,

most of the volume of the atom is occupied by electrons, so the size of an atom depends on its electrons. In fact, an atom's electrons determine many of its chemical and physical properties.

In the early twentieth century, scientists discovered that the *absolutely small* (or *quantum*) world of the electron behaves differently than the *large* (or *macroscopic*) world that we are used to observing. Chief among these differences is the idea that, when unobserved, *quantum particles like electrons can be in two different states at the same time*. For example, through a process called radioactive decay (see Chapter 20) an atom can emit small (that is, *absolutely small*) energetic particles from its nucleus. In the macroscopic world, something either emits an energetic particle or it doesn't. In the quantum world, however, the unobserved atom can be in a state in which it is doing both—emitting the particle and not emitting the particle—simultaneously. At first, this seems absurd. The absurdity resolves itself, however, upon observation. When we set out to measure the emitted particle, the act of measurement actually forces the atom into one state or other.

Early twentieth-century physicists struggled with this idea. Austrian physicist Erwin Schrödinger (1887–1961), in an attempt to demonstrate that this quantum strangeness could never transfer itself to the macroscopic world, published a paper in 1935 that contained a thought experiment about a cat, now known as Schrödinger's cat. In the thought experiment, the cat is put into a steel chamber that contains radioactive atoms such as the one described in the previous paragraph. The chamber is equipped with a mechanism that, upon the emission of an energetic particle by one of the radioactive atoms, causes a hammer to break a flask of hydrocyanic acid, a poison. If the flask breaks, the poison is released and the cat dies.

Now here comes the absurdity: If the steel chamber is closed, the whole system remains unobserved, and the radioactive atom is in a state in which it has emitted the particle and not emitted the particle (with equal probability). Therefore the cat is both dead and undead. Schrödinger put it this way: “[The steel chamber would have] *in it the living and dead cat (pardon the expression) mixed or smeared out in equal parts.*” When the chamber is opened, the act of observation forces the entire system into one state or the other: The cat is either dead or alive, not both. However, while unobserved, the cat is both dead and alive. The absurdity of the both dead and undead cat in Schrödinger's thought experiment was meant to demonstrate how quantum strangeness does not transfer to the macroscopic world.

In this chapter, we examine the **quantum-mechanical model** of the atom, a model that explains the strange behavior of electrons. In particular, we focus on how the model describes electrons as they exist within atoms, and later we shall see how those electrons determine the chemical and physical properties of elements.

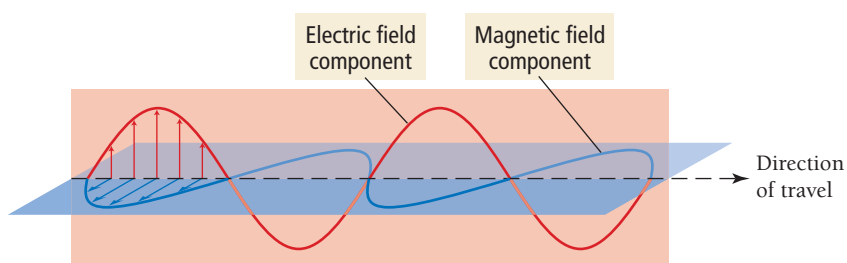


KEY CONCEPT VIDEO
The Nature of Light

2.2 The Nature of Light

Before we explore electrons and their behavior within the atom, we must understand some of the properties of light. As quantum-mechanical theory was developed, light was (surprisingly) found to have many characteristics in common with electrons. Chief among these characteristics is the *wave-particle duality* of light. Certain properties of light are best described by thinking of it as a wave, while other properties are best described by thinking of it as a particle. In this section, we first explore the wave behavior of light, and then its particle behavior. We then turn to electrons to see how they display the same wave-particle duality.

Electromagnetic Radiation



The Wave Nature of Light

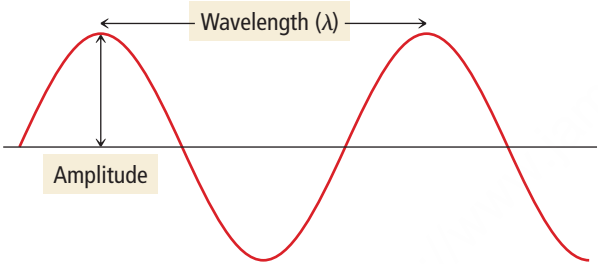
Light is **electromagnetic radiation**, a type of energy embodied in oscillating electric and magnetic fields. A *magnetic field* is a region of space where a magnetic particle experiences a force (think of the space around a magnet). An *electric field* is a region of space where an electrically charged particle experiences a force. A proton, for example, has an electric field around it. If you bring another charged particle into that field, that particle experiences a force.

Electromagnetic radiation can be described as a wave composed of oscillating, mutually perpendicular electric and magnetic fields propagating through space, as shown in **Figure 2.1**. In a vacuum, these waves move at a constant speed of 3.00×10^8 m/s (186,000 mi/s)—fast enough to circle

▲ **FIGURE 2.1 Electromagnetic Radiation** Electromagnetic radiation can be described as a wave composed of oscillating electric and magnetic fields. The fields oscillate in perpendicular planes.

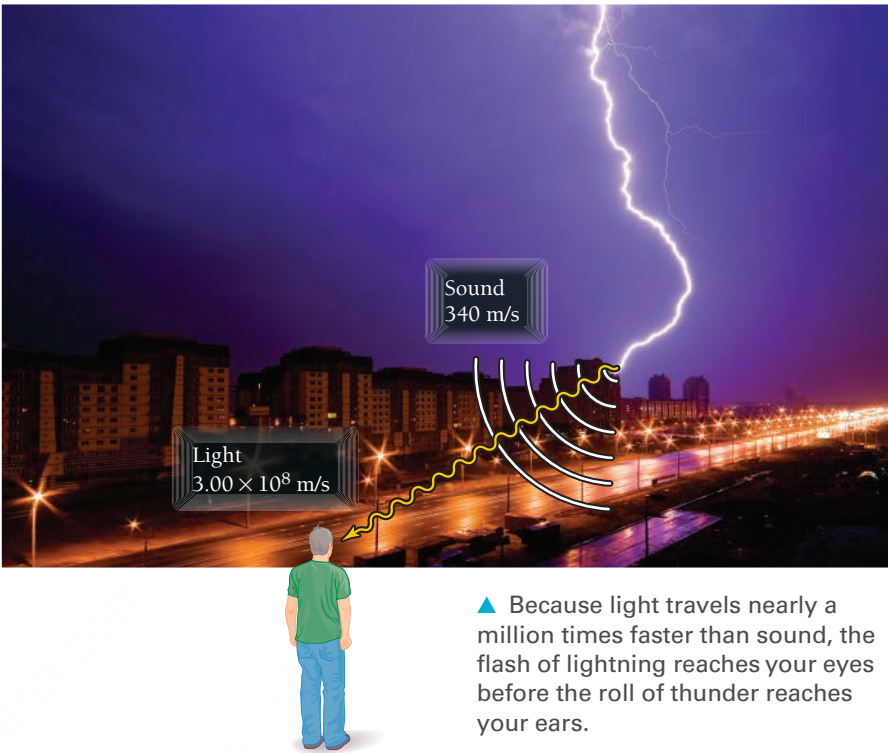
the Earth in one-seventh of a second. This great speed is the reason for the delay between the moment when you see a firework in the sky and the moment when you hear the sound of its explosion. The light from the exploding firework reaches your eye almost instantaneously. The sound, traveling much more slowly (340 m/s), takes longer. The same thing happens in a thunderstorm—you see the flash of lightning immediately, but the sound of thunder takes a few seconds to reach you. (The sound of thunder is delayed by five seconds for each mile between you and its origin.)

We can characterize a wave by its *amplitude* and its *wavelength*. In the graphical representation shown here, the **amplitude** of the wave is the vertical height of a crest (or depth of a trough). The amplitude of the electric and magnetic field waves in light determines the light's *intensity* or *brightness*—the greater the amplitude, the greater the intensity. The **wavelength** (λ) of the wave is the distance between adjacent crests (or any two analogous points) and is measured in units such as meters, micrometers, or nanometers.



The wavelength of a light wave determines its color (**Figure 2.2 ▼**).

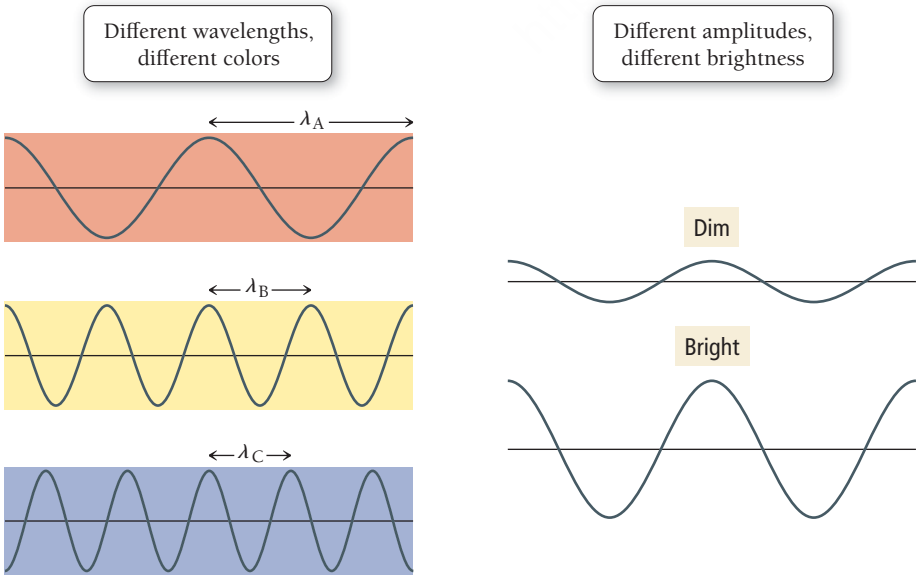
Like all waves, light is also characterized by its **frequency** (ν), the number of cycles (or wave crests) that pass through a stationary point in a given period of time. The units of frequency are cycles per second (cycle/s) or simply s^{-1} . An equivalent unit of frequency is the hertz (Hz), defined as 1 cycle/s. The frequency of a wave is directly proportional to the speed at which the wave is traveling—the faster the wave, the more crests will pass a fixed location per unit time. Frequency is also *inversely* proportional to




▲ Because light travels nearly a million times faster than sound, the flash of lightning reaches your eyes before the roll of thunder reaches your ears.

The symbol λ is the Greek letter lambda, pronounced “lamb-duh.”

The symbol ν is the Greek letter nu, pronounced “noo.”



◀ **FIGURE 2.2 Wavelength and Amplitude** Wavelength and amplitude are independent properties. The wavelength of light determines its color. The amplitude, or intensity, determines its brightness.



▲ FIGURE 2.3 Components of White Light We can pass white light through a prism and decompose it into its constituent colors, each with a different wavelength. The array of colors makes up the spectrum of visible light.

A red shirt reflects red light (and absorbs other colors).



▲ FIGURE 2.4 The Color of an Object

the wavelength (λ)—the farther apart the crests, the fewer will pass a fixed location per unit time. For light, therefore, we can write:

$$\nu = \frac{c}{\lambda} \quad [2.1]$$

where the speed of light, c , and the wavelength, λ , are both expressed in terms of the same unit of distance. Wavelength and frequency represent different ways of specifying the same information—if we know one, we can calculate the other.

The different colors in *visible light*—light that can be seen by the human eye—correspond to different wavelengths (or frequencies). White light, produced by the sun or by a light bulb, contains a spectrum of wavelengths and therefore a spectrum of colors. We see these colors—red, orange, yellow, green, blue, indigo, and violet—in a rainbow or when white light is passed through a prism (**Figure 2.3** ◀). Red light, with a wavelength of about 750 nanometers (nm), has the longest wavelength of visible light; violet light, with a wavelength of about 400 nm, has the shortest. (Recall that nano means 10^{-9} .) The presence of a variety of wavelengths in white light is responsible for the way we perceive colors in objects. When a substance absorbs some colors while reflecting others, it appears colored. For example, a red shirt appears red because it reflects predominantly red light while absorbing most other colors (**Figure 2.4** ◀). Our eyes see only the reflected light, making the shirt appear red.

EXAMPLE 2.1

Wavelength and Frequency

Calculate the wavelength (in nm) of the red light emitted by a barcode scanner that has a frequency of $4.62 \times 10^{14} \text{ s}^{-1}$.

SOLUTION

You are given the frequency of the light and asked to find its wavelength. Use Equation 2.1, which relates frequency to wavelength. You can convert the wavelength from meters to nanometers by using the conversion factor between the two ($1 \text{ nm} = 10^{-9} \text{ m}$).

$$\begin{aligned} \nu &= \frac{c}{\lambda} \\ \lambda &= \frac{c}{\nu} = \frac{3.00 \times 10^8 \text{ m/s}}{4.62 \times 10^{14} \text{ s}^{-1}} \\ &= 6.49 \times 10^{-7} \text{ m} \\ &= 6.49 \times 10^{-7} \text{ m} \times \frac{1 \text{ nm}}{10^{-9} \text{ m}} = 649 \text{ nm} \end{aligned}$$

FOR PRACTICE 2.1

A laser dazzles the audience at a rock concert by emitting green light with a wavelength of 515 nm. Calculate the frequency of the light.

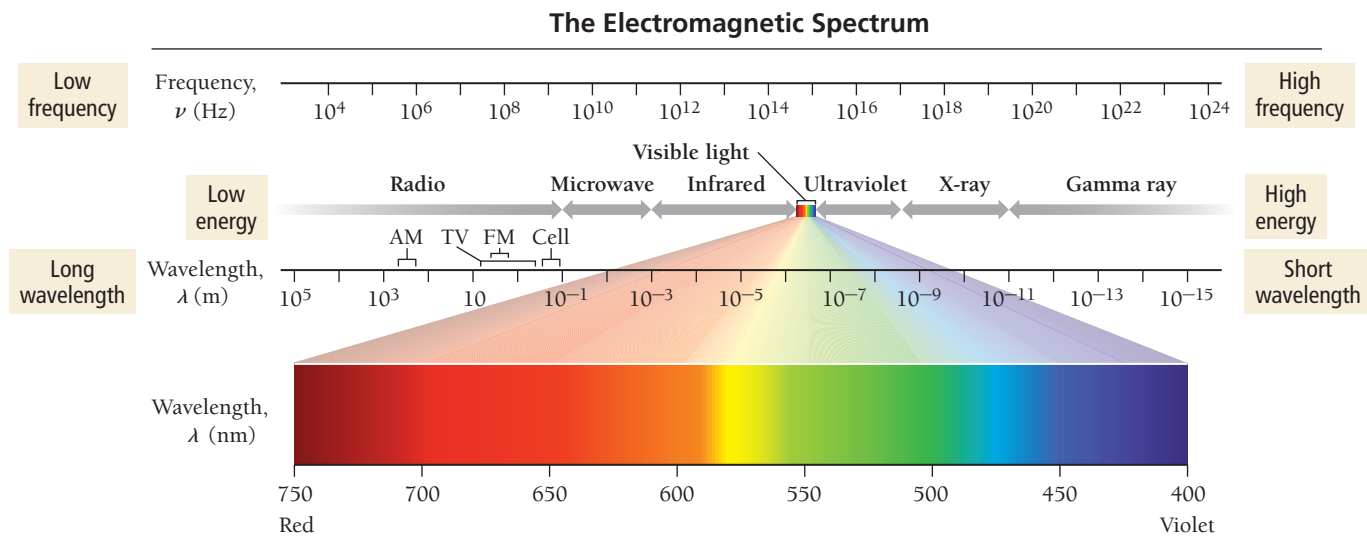
Answers to For Practice and For More Practice problems are found in Appendix IV.

The Electromagnetic Spectrum

Visible light makes up only a tiny portion of the entire **electromagnetic spectrum**, which includes all wavelengths of electromagnetic radiation. **Figure 2.5** ▶ shows the main regions of the electromagnetic spectrum, ranging in wavelength from 10^{-15} m (gamma rays) to 10^5 m (radio waves). Short-wavelength, high-frequency radiation is on the right, and long-wavelength, low-frequency radiation on the left. As you can see, visible light constitutes only a small region in the middle.

We will see later in this section that short-wavelength light inherently has greater energy than long-wavelength light. The most energetic forms of electromagnetic radiation have the shortest wavelengths. The form of electromagnetic radiation with the shortest wavelength is the **gamma (γ) ray**. Gamma

We will discuss gamma rays in more detail in Chapter 20.



▲ **FIGURE 2.5 The Electromagnetic Spectrum** The right side of the spectrum consists of high-energy, high-frequency, short-wavelength radiation. The left side consists of low-energy, low-frequency, long-wavelength radiation.

rays are produced by the sun, other stars, and certain unstable atomic nuclei on Earth. Excessive exposure to gamma rays is dangerous to humans because the high energy of gamma rays can damage biological molecules.

Next on the electromagnetic spectrum, with longer wavelengths than gamma rays, are **X-rays**, familiar to us from their medical use. X-rays pass through many substances that block visible light and are therefore used to image bones and internal organs. Like gamma rays, X-rays are energetic enough to damage biological molecules. While several annual exposures to X-rays are relatively harmless, too much exposure to X-rays increases cancer risk.

Sandwiched between X-rays and visible light in the electromagnetic spectrum is **ultraviolet (UV) radiation**, most familiar to us as the component of sunlight that produces a sunburn or suntan. While not as energetic as gamma rays or X-rays, ultraviolet light still carries enough energy to damage biological molecules. Excessive exposure to ultraviolet light increases the risk of skin cancer and cataracts and causes premature wrinkling of the skin.

Next on the spectrum is **visible light**, ranging from violet (shorter wavelength, higher energy) to red (longer wavelength, lower energy). Visible light—at low to moderate intensity—does not carry enough energy to damage biological molecules. It does, however, cause certain molecules in our eyes to change their shape, sending a signal to our brains that results in our ability to see.

Beyond visible light lies **infrared (IR) radiation**. The heat you feel when you place your hand near a hot object is infrared radiation. All warm objects, including human bodies, emit infrared light. Although infrared light is invisible to our eyes, infrared sensors can detect it and are often employed in night vision technology to help people “see” in the dark.

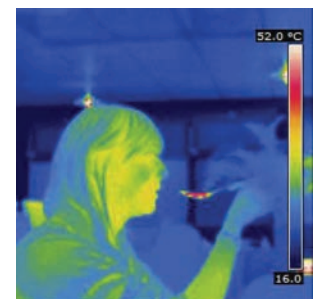
Beyond infrared light, at longer wavelengths still, are **microwaves**, used for radar and in microwave ovens. Although microwave radiation has longer wavelengths and therefore lower energies than visible or infrared light, it is efficiently absorbed by water and can therefore heat substances that contain water. The longest wavelengths are those of **radio waves**, which are used to transmit the signals responsible for AM and FM radio, cellular telephone, television, and other forms of communication.


► Warm objects emit infrared light, which is invisible to the eye but can be captured on film or by detectors to produce an infrared photograph.

The wavelengths of gamma rays and X-rays overlap a bit. Radiation produced by radioactive nuclei are often called gamma rays regardless of their wavelength.



▲ To produce a medical X-ray, the patient is exposed to short-wavelength electromagnetic radiation that passes through the skin to create an image of bones and internal organs.





Conceptual
Connection

Electromagnetic Radiation

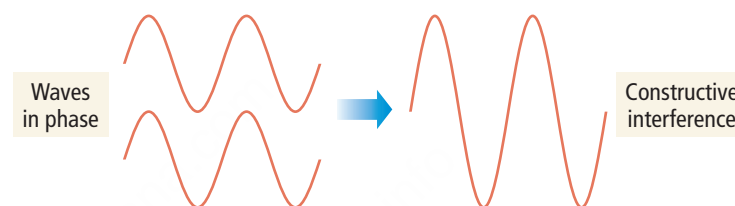
Arrange the following types of electromagnetic radiation in order of (a) increasing frequency; and (b) increasing wavelength: visible, X-ray, infrared.



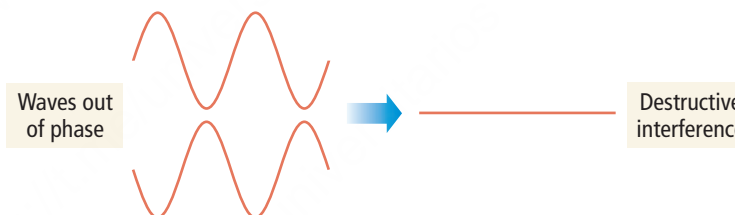
▲ When a reflected wave meets an incoming wave near the shore, the two waves interfere constructively for an instant, producing a large-amplitude spike.

Interference and Diffraction

Waves, including electromagnetic waves, interact with each other in a characteristic way called **interference**: they cancel each other out or build each other up, depending on their alignment. For example, if two waves of equal amplitude are *in phase* when they interact—that is, they align with overlapping crests—a wave with twice the amplitude results. This is called **constructive interference**.



If, however, two waves are completely *out of phase* when they interact—that is, they align so that the crest from one overlaps with the trough from the other—the waves cancel by **destructive interference**.



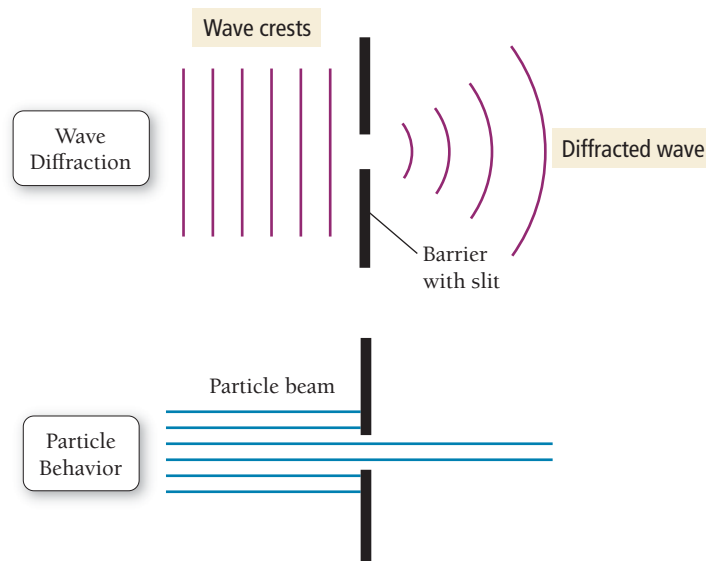
Understanding interference in waves is critical to understanding the wave nature of the electron, as you will soon see.

Waves also exhibit a characteristic behavior called **diffraction** (**Figure 2.6** ▶). When a wave encounters an obstacle or a slit that is comparable in size to its wavelength, it bends (or *diffracts*) around it. The diffraction of light through two slits separated by a distance comparable to the wavelength of the light, coupled with interference, results in an *interference pattern* as shown in **Figure 2.7** ▶. Each slit acts as a new wave source, and the two new waves interfere with each other. The resulting pattern is a series of bright and dark lines that can be viewed on a screen (or recorded on a film) placed a short distance behind the slits. At the center of the screen, the two waves travel equal distances and interfere constructively to produce a bright line. A small distance away from the center in either direction, the two waves travel slightly different distances, so that they are out of phase. At the point where the difference in distance is one-half of one wavelength, the interference is destructive and a dark line appears on the screen. Moving a bit further away from the center produces constructive interference again because the difference between the paths is one whole wavelength. The end result is the interference pattern. Notice that interference results from the ability of a wave to diffract through two slits—an inherent property of waves.

The Particle Nature of Light

Prior to the early 1900s, and especially after the discovery of the diffraction of light, light was thought to be purely a wave phenomenon. Its behavior was described adequately by classical electromagnetic theory, which treated the electric and magnetic fields that constitute light as waves propagating through space. However, a number of discoveries brought the classical view into question. Chief among these was the *photoelectric effect*.

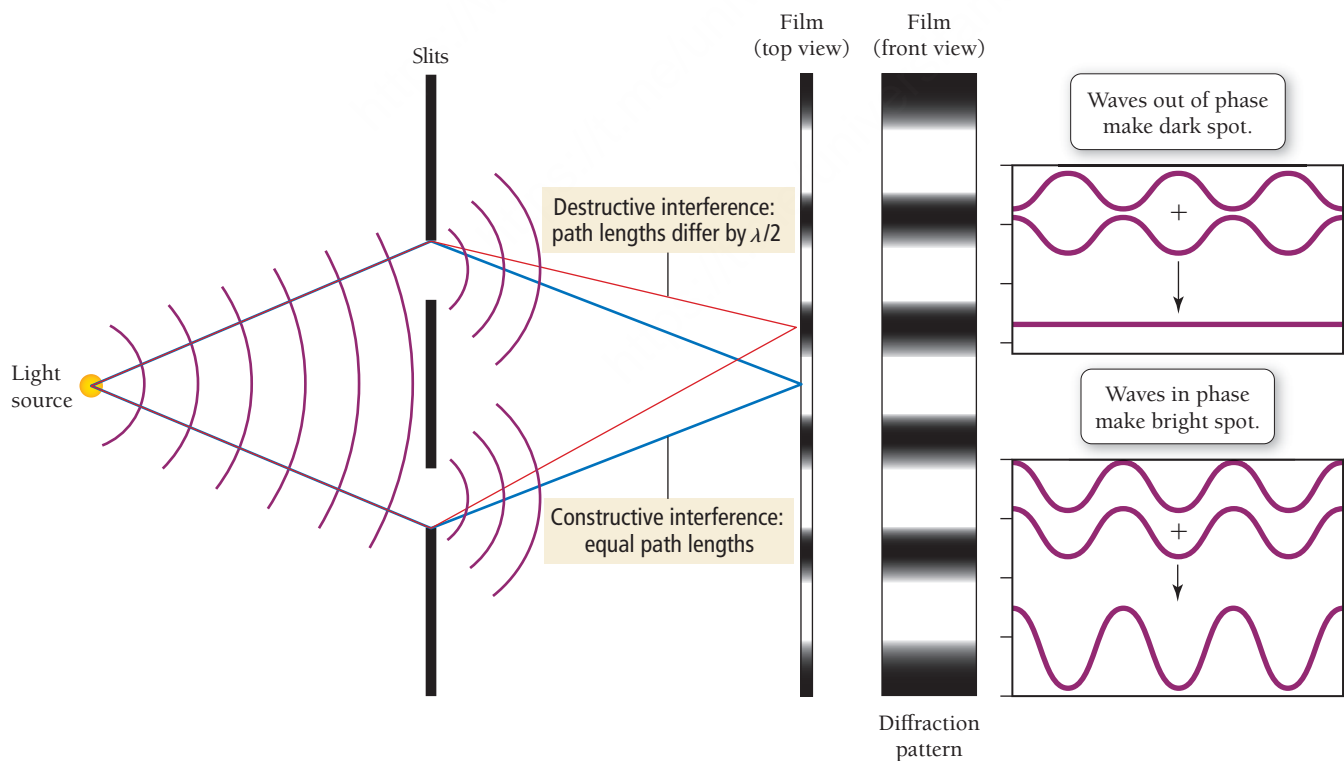
The term *classical*, as in classical electromagnetic theory or classical mechanics, refers to descriptions of matter and energy before the advent of quantum mechanics.



◀ **FIGURE 2.6 Diffraction** In this view from above, we can see how waves bend, or diffract, when they encounter an obstacle or slit with a size comparable to their wavelength. When a wave passes through a small opening, it spreads out. Particles, by contrast, do not diffract; they simply pass through the opening.

The **photoelectric effect** is the observation that many metals emit electrons when light shines upon them, as shown in **Figure 2.8** ▶ on page 82. Classical electromagnetic theory attributed this effect to the transfer of energy from the light to an electron in the metal, which resulted in the dislodgment of the electron. If this explanation were correct, the amount of energy transferred from the light to the electron would have to exceed the electron's **binding energy**, the energy with which the electron is bound to the metal.

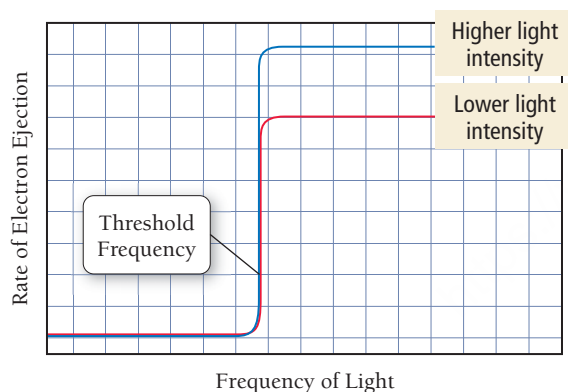
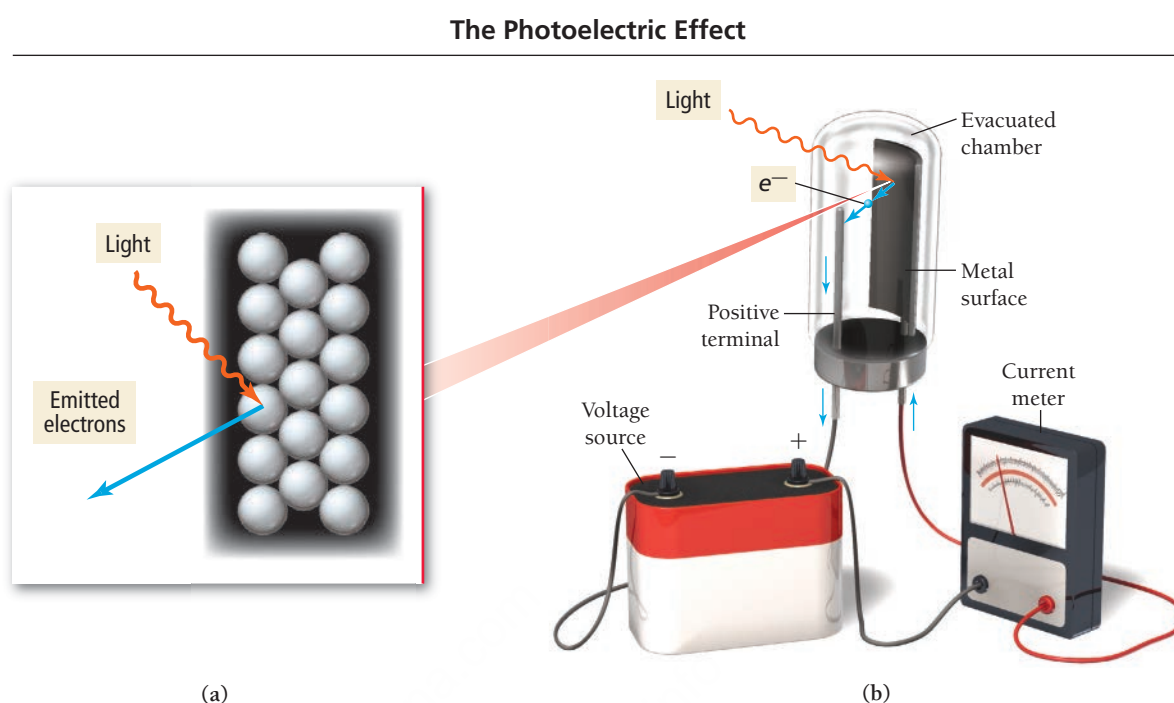
Interference from Two Slits



▲ **FIGURE 2.7 Interference from Two Slits** When a beam of light passes through two small slits, the two resulting waves interfere with each other. Whether the interference is constructive or destructive at any given point depends on the difference in the path lengths traveled by the waves. The resulting interference pattern appears as a series of bright and dark lines on a screen.

► FIGURE 2.8 The Photoelectric Effect

(a) When sufficiently energetic light shines on a metal surface, the surface emits electrons. (b) The emitted electrons can be measured as an electrical current.



▲ **FIGURE 2.9 Threshold Frequency** A plot of the electron ejection rate versus frequency of light for the photoelectric effect. Electrons are only ejected when the energy of a photon exceeds the energy with which an electron is held to the metal. The frequency at which this occurs is the *threshold frequency*.

Einstein was not the first to suggest that energy was quantized. Max Planck used the idea in 1900 to account for certain characteristics of radiation from hot bodies. However, Planck did not suggest that light actually traveled in discrete packets.

The energy of a photon is directly proportional to its frequency and inversely proportional to its wavelength.

Since the energy of a classical electromagnetic wave depends only on its amplitude (or intensity), the rate at which electrons would leave the metal due to the photoelectric effect would depend only on the intensity of the light shining upon the surface (not on the wavelength). If the intensity of the light was low, there should be a *lag time* (or a delay) between the initial shining of the light and the subsequent emission of an electron. The lag time would be the minimum amount of time required for the dim light to transfer sufficient energy to the electron to dislodge it.

The experimental results, however, do not support the classical prediction. High-frequency, low-intensity light produces electrons *without* the predicted lag time. Furthermore, the light used to dislodge electrons in the photoelectric effect exhibits a *threshold frequency*, below which no electrons are emitted from the metal, no matter how long the light shines on the metal. **Figure 2.9** ◀ is a graph of the rate of electron ejection from the metal versus the frequency of light used. Notice that increasing the intensity of the light does not change the threshold frequency. In other words, low-frequency (long-wavelength) light *does not* eject electrons from a metal regardless of its intensity or its duration. But high-frequency (short-wavelength) light *does* eject electrons, even if its intensity is low. What could explain this unexpected behavior?

In 1905, Albert Einstein (1879–1950) proposed a bold explanation for the photoelectric effect: *Light energy must come in packets*. According to Einstein, the amount of energy (E) in a light packet depends on its frequency (ν) according to the following equation:

$$E = h\nu \quad [2.2]$$

where h , called *Planck's constant*, has the value $h = 6.626 \times 10^{-34} \text{ J} \cdot \text{s}$. A *packet* of light is called a **photon** or a **quantum** of light. Since $\nu = c/\lambda$, the energy of a photon can also be expressed in terms of wavelength:

$$E = \frac{hc}{\lambda} \quad [2.3]$$

Unlike classical electromagnetic theory, in which light was viewed purely as a wave whose intensity was *continuously variable*, Einstein suggested that light was *lumpy*. From this perspective, a beam of light is *not* a wave propagating through space, but a shower of particles (photons), each with energy $h\nu$.

EXAMPLE 2.2

Photon Energy

Interactive
Worked Example
Video 2.2

PEARSON
eText
2.0

A nitrogen gas laser pulse with a wavelength of 337 nm contains 3.83 mJ of energy. How many photons does it contain?	
SORT You are given the wavelength and total energy of a light pulse and asked to find the number of photons it contains.	GIVEN: $E_{\text{pulse}} = 3.83 \text{ mJ}$ $\lambda = 337 \text{ nm}$ FIND: number of photons
STRATEGIZE In the first part of the conceptual plan, calculate the energy of an individual photon from its wavelength. In the second part, divide the total energy of the pulse by the energy of a photon to get the number of photons in the pulse.	CONCEPTUAL PLAN <div><div>λ</div><div>\longrightarrow</div><div>E_{photon}</div></div> $E = \frac{hc}{\lambda}$ $\frac{E_{\text{pulse}}}{E_{\text{photon}}} = \text{number of photons}$ RELATIONSHIPS USED $E = hc/\lambda$ (Equation 2.3)
SOLVE To execute the first part of the conceptual plan, convert the wavelength to meters and substitute it into Equation 2.3 to calculate the energy of a 337-nm photon. To execute the second part of the conceptual plan, convert the energy of the pulse from mJ to J. Then divide the energy of the pulse by the energy of a photon to obtain the number of photons.	SOLUTION $\lambda = 337 \text{ nm} \times \frac{10^{-9} \text{ m}}{1 \text{ nm}} = 3.37 \times 10^{-7} \text{ m}$ $E_{\text{photon}} = \frac{hc}{\lambda} = \frac{(6.626 \times 10^{-34} \text{ J}\cdot\text{s}) \left(3.00 \times 10^8 \frac{\text{m}}{\text{s}} \right)}{3.37 \times 10^{-7} \text{ m}}$ $= 5.8985 \times 10^{-19} \text{ J}$ $3.83 \text{ mJ} \times \frac{10^{-3} \text{ J}}{1 \text{ mJ}} = 3.83 \times 10^{-3} \text{ J}$ $\text{number of photons} = \frac{E_{\text{pulse}}}{E_{\text{photon}}} = \frac{3.83 \times 10^{-3} \text{ J}}{5.8985 \times 10^{-19} \text{ J}}$ $= 6.49 \times 10^{15} \text{ photons}$
CHECK The units of the answer, photons, are correct. The magnitude of the answer (10^{15}) is reasonable. Photons are small particles and any macroscopic collection should contain a large number of them.	
FOR PRACTICE 2.2 A 100-watt light bulb radiates energy at a rate of 100 J/s. (The watt, a unit of power, or energy over time, is defined as 1 J/s.) If all of the light emitted has a wavelength of 525 nm, how many photons are emitted per second? (Assume three significant figures in this calculation.)	
FOR MORE PRACTICE 2.2 The energy required to dislodge electrons from sodium metal via the photoelectric effect is 275 kJ/mol. What wavelength in nm of light has sufficient energy per photon to dislodge an electron from the surface of sodium?	

EXAMPLE 2.3

Interactive
Worked Example
Video 2.3

PEARSON
eText
2.0

Wavelength, Energy, and Frequency

Arrange these three types of electromagnetic radiation—visible light, X-rays, and microwaves—in order of increasing:

- (a) wavelength (b) frequency (c) energy per photon

SOLUTION

Examine Figure 2.5 and note that X-rays have the shortest wavelength, followed by visible light and then microwaves.	(a) wavelength X-rays < visible < microwaves
Since frequency and wavelength are inversely proportional—the longer the wavelength, the shorter the frequency—the ordering with respect to frequency is the reverse of the order with respect to wavelength.	(b) frequency microwaves < visible < X-rays
Energy per photon decreases with increasing wavelength, but increases with increasing frequency; therefore the ordering with respect to energy per photon is the same as for frequency.	(c) energy per photon microwaves < visible < X-rays

FOR PRACTICE 2.3

Arrange these three colors of visible light—green, red, and blue—in order of increasing:

- (a) wavelength (b) frequency (c) energy per photon

The symbol ϕ is the Greek letter phi, pronounced “fi.”

Einstein’s idea that light is *quantized* elegantly explains the photoelectric effect. The emission of electrons from the metal depends on whether or not a single photon has sufficient energy (as given by $h\nu$) to dislodge a single electron. For an electron bound to the metal with binding energy ϕ , the threshold frequency is reached when the energy of the photon is equal to ϕ .

Low-frequency light does not eject electrons because no single photon has the minimum energy necessary to dislodge the electron. We can draw an analogy between a photon ejecting an electron from a metal surface and a ball breaking a glass window. In this analogy, low-frequency photons are like ping-pong balls—a ping-pong ball thrown at a glass window does not break it (just as a low-frequency photon does not eject an electron). Increasing the *intensity* of low-frequency light is like increasing the number of ping-pong balls thrown at the window—doing so simply increases the number of low-energy photons but does not produce any single photon with sufficient energy. In contrast, increasing the *frequency* of the light, even at low intensity, *increases the energy of each photon*. In our analogy, a high-frequency photon is like a baseball—one baseball thrown at a glass window breaks it (just as a high-frequency photon dislodges an electron with no lag time).

Threshold frequency condition

$$h\nu = \phi$$

energy of photon binding energy of emitted electron

As the frequency of the light increases over the threshold frequency, the excess energy of the photon (beyond what is needed to dislodge the electron) transfers to the electron in the form of kinetic energy. The kinetic energy (KE) of the ejected electron, therefore, is the difference between the energy of the photon ($h\nu$) and the binding energy of the electron, as given by the equation:

$$\text{KE} = h\nu - \phi$$

Although the quantization of light explains the photoelectric effect, the wave explanation of light continues to have explanatory power as well, depending on the circumstances of the particular observation. So the principle that slowly emerged (albeit with some measure of resistance) is what we now call the *wave-particle duality of light*. Sometimes light appears to behave like a wave, at other times like a particle. The behavior we observe depends on the particular experiment.

The Photoelectric Effect

We shine light of three different wavelengths—325 nm, 455 nm, and 632 nm—on a metal surface. The observations for each wavelength, labeled A, B, and C, are:

Observation A: No photoelectrons are observed.

Observation B: Photoelectrons with a kinetic energy of 155 kJ/mol are observed.

Observation C: Photoelectrons with a kinetic energy of 51 kJ/mol are observed.

Which observation corresponds to which wavelength of light?

2.2 Cc

Conceptual
Connection

PEARSON
eText
2.0

2.3 Atomic Spectroscopy and the Bohr Model

The discovery of the particle nature of light began to break down the division that existed in nineteenth-century physics between electromagnetic radiation, which was thought of as a wave phenomenon, and the small particles (protons, neutrons, and electrons) that compose atoms, which were thought to follow Newton's laws of motion. Just as the photoelectric effect suggested the particle nature of light, certain observations about atoms began to suggest a wave nature for particles. The most important of these observations came from *atomic spectroscopy*, the study of the electromagnetic radiation absorbed and emitted by atoms.

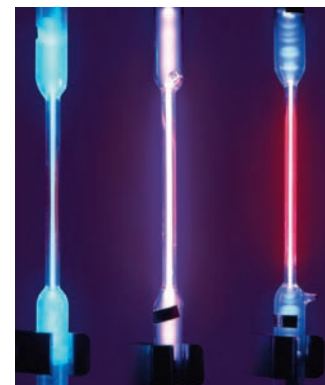
Atomic Spectra

When an atom absorbs energy—in the form of heat, light, or electricity—it often re-emits that energy as light. For example, a neon sign is composed of one or more glass tubes filled with neon gas. When an electric current is passed through the tube, the neon atoms absorb some of the electrical energy and re-emit it as the familiar red light of a neon sign. If the atoms in the tube are different (that is, not neon), they emit light of a different color. In other words, atoms of each element emit light of a characteristic color. Mercury atoms, for example, emit light that appears blue, helium atoms emit light that appears violet, and hydrogen atoms emit light that appears reddish (**Figure 2.10** ▶).

Closer inspection of the light emitted by various atoms reveals that it contains several distinct wavelengths. We can separate the light emitted by a single element in a glass tube into its constituent wavelengths by passing it through a prism (just like we separate the white light from a light bulb), as shown in **Figure 2.11a** ▶ on the next page. The result is a series of bright lines called an **emission spectrum**. The emission spectrum of a particular element is always the same—it consists of the same bright lines at the same characteristic wavelengths—and we can use it to identify the element. For example, light arriving from a distant star contains the emission spectra of the elements that compose the star. Analysis of the light allows us to identify the elements present in the star.

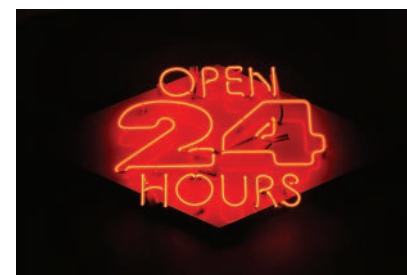
Notice the differences between the white light spectrum and the emission spectra of hydrogen, helium, and barium in **Figure 2.11b** ▶ on the next page. The white light spectrum is *continuous*, meaning that there are no sudden interruptions in the intensity of the light as a function of wavelength—the spectrum consists of light of all wavelengths. The emission spectra of hydrogen, helium, and barium, however, are not continuous—they consist of bright lines at specific wavelengths, with complete darkness in between. That is, only certain discrete wavelengths of light are present. Classical physics could not explain why these spectra consisted of discrete lines. In fact, according to classical physics, an atom composed of an electron orbiting a nucleus should emit a continuous white light spectrum. Even more problematic, the electron should lose energy as it emits the light and spiral into the nucleus. According to classical physics, an atom should not even be stable.

Johannes Rydberg, a Swedish mathematician, analyzed many atomic spectra and developed an equation that predicts the wavelengths of the hydrogen emission spectrum. Although these predictions are accurate, Rydberg's equation (shown in the margin) gives little insight into *why* atomic spectra are discrete, *why* atoms are stable, or *why* his equation works.



▲ **FIGURE 2.10** Mercury, Helium, and Hydrogen Each element emits a characteristic color.

Remember that the color of visible light is determined by its wavelength.

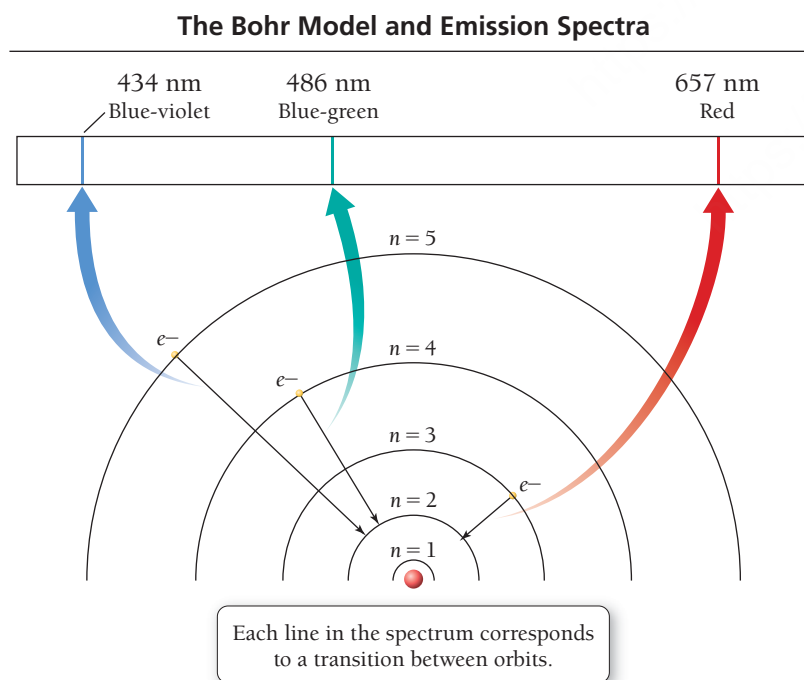
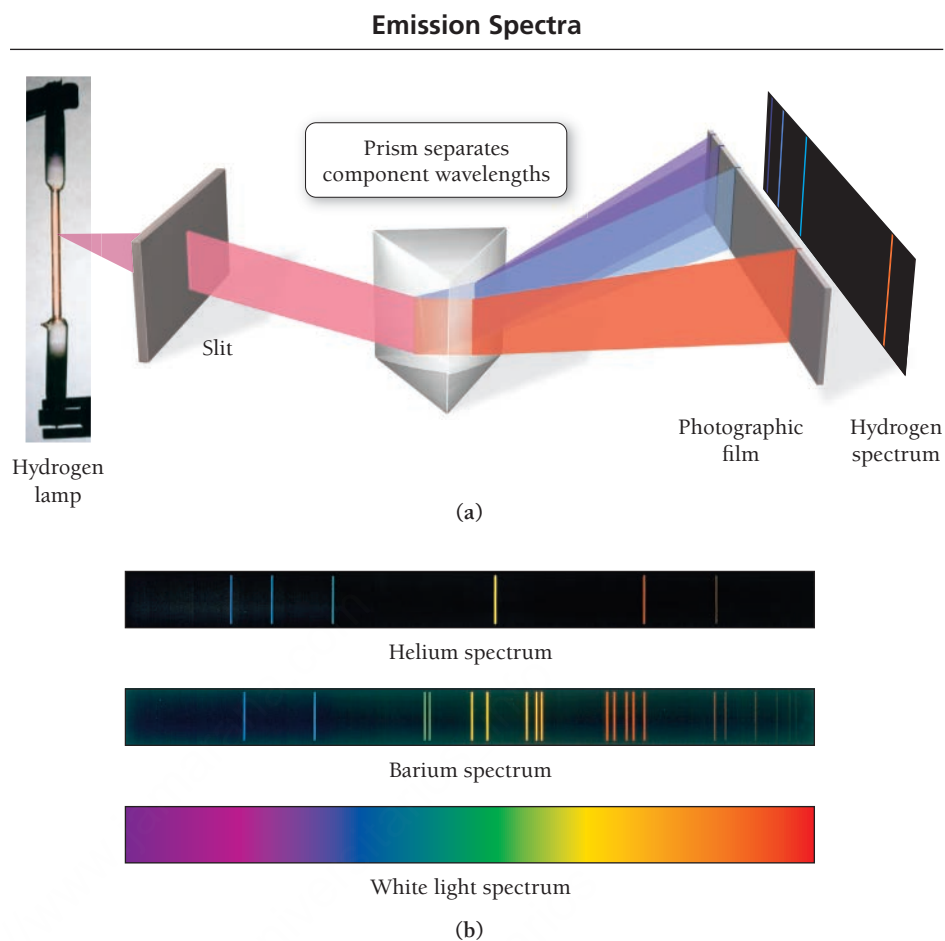


▲ The red light from a neon sign is emitted by neon atoms that have absorbed electrical energy, which they re-emit as visible radiation.

The Rydberg equation is $1/\lambda = R(1/m^2 - 1/n^2)$, where R is the Rydberg constant ($1.097 \times 10^7 \text{ m}^{-1}$), and m and n are integers.

► **FIGURE 2.11 Emission**

Spectra (a) The light emitted from a hydrogen, helium, or barium lamp consists of specific wavelengths, which can be separated by passing the light through a prism. (b) The resulting bright lines constitute an emission spectrum characteristic of the element that produced it.

**The Bohr Model**

The Danish physicist Niels Bohr (1885–1962) attempted to develop a model for the atom that explained atomic spectra. In his model, electrons travel around the nucleus in circular orbits (analogous to those of the planets around the sun). However, in contrast to planetary orbits—which can theoretically exist at any distance from the sun—Bohr's orbits exist only at specific, fixed distances from the nucleus. The energy of each Bohr orbit is also fixed, or quantized. Bohr called these orbits *stationary states* and suggested that, although they obey the laws of classical mechanics, they also possess “a peculiar, mechanically unexplainable, stability.” We now know that the stationary states were really manifestations of the wave nature of the electron, which we will expand upon shortly. Bohr further proposed that, in contradiction to classical electromagnetic theory, no radiation is emitted by an electron orbiting the nucleus in a stationary state. It is only when an electron jumps, or makes a *transition*, from one stationary state to another that radiation is emitted or absorbed (**Figure 2.12** ◀).

◀ **FIGURE 2.12 The Bohr Model and Emission Spectra for the Hydrogen Atom**


The transitions between stationary states in a hydrogen atom are quite unlike any transitions that we might be familiar with in the macroscopic world. The electron is *never* observed *between states*; it is observed only in one state or another. The emission spectrum of an atom consists of discrete lines because the stationary states exist only at specific, fixed energies. The energy of the photon emitted when an electron makes a transition from one stationary state to another is the energy difference between the two stationary states. Transitions between stationary states that are closer together, therefore, produce light of lower energy (longer wavelength) than transitions between stationary states that are farther apart.

In spite of its initial success in explaining the line spectrum of hydrogen, the Bohr model left many unanswered questions. It did, however, serve as an intermediate model between a classical view of the electron and a fully quantum-mechanical view, and therefore has great historical and conceptual importance. Nonetheless, it was ultimately replaced by a more complete quantum-mechanical theory that fully incorporated the wave nature of the electron. We examine this theory in Section 2.4.

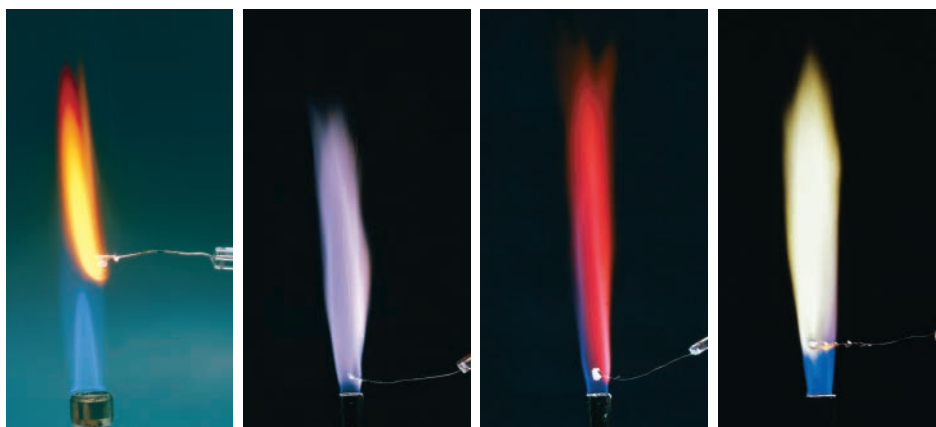
Atomic Spectroscopy and the Identification of Elements

When you check out of the grocery store, a laser scanner reads the barcode on the items that you buy. Each item has a unique code that identifies it and its price. Similarly, each element in the periodic table has a spectrum unlike that of any other element. **Figure 2.13** ▼ shows the emission spectra of oxygen and neon. (In Figure 2.11, we saw the emission spectra of hydrogen, helium, and barium.) Each spectrum is unique and, as such, can be used to identify the substance.

The presence of intense lines in the spectra of a number of metals is the basis for *flame tests*, simple tests used to identify elements in ionic compounds in the absence of a precise analysis of a compound's spectrum. For example, the emission spectrum of sodium features two closely spaced, bright yellow lines. When a crystal of a sodium salt (or a drop of a solution containing a sodium salt) is put into a flame, the flame glows bright yellow (**Figure 2.14** ▼). As Figure 2.14 shows, other metals exhibit similarly characteristic colors in flame tests. Each color represents an especially bright spectral emission line (or a combination of two or more such lines). Similar emissions form the basis of the colors seen in fireworks.



◀ **FIGURE 2.13** Emission Spectra of Oxygen and Neon The emission spectrum of each element is unique, and we can use it to identify the element.



◀ **FIGURE 2.14** Flame Tests for Sodium, Potassium, Lithium, and Barium We can identify elements by the characteristic color of the light they produce when heated. The colors derive from especially bright lines in their emission spectra.

► **FIGURE 2.15 Emission and Absorption Spectrum of Mercury** Elements absorb light of the same wavelengths that they radiate when heated. When these wavelengths are subtracted from a beam of white light, the result is a pattern of dark lines corresponding to an absorption spectrum.




▲ Fireworks typically contain the salts of such metals as sodium, calcium, strontium, barium, and copper. Emissions from these elements produce the brilliant colors of pyrotechnic displays.



Although the *emission* of light from elements is easier to detect, the *absorption* of light by elements is even more commonly used for purposes of identification. Whereas an emission spectrum consists of bright lines on a dark background, an **absorption spectrum** consists of dark lines on a bright background (**Figure 2.15 ▲**). An absorption spectrum is measured by passing white light through a sample and observing what wavelengths are *missing* due to absorption by the sample. Notice that, in the spectra of mercury in Figure 2.15, the absorption lines are at the same wavelengths as the emission lines. This is because the processes that produce them are mirror images. In emission, an electron makes a transition from a higher-energy level to a lower-energy one. In absorption, the transition is between the same two energy levels, but from the lower level to the higher one.

Absorption spectrometers, found in most chemistry laboratories, typically plot the intensity of absorption as a function of wavelength. Such plots are useful both for identifying substances (qualitative analysis) and for determining the concentration of substances (quantitative analysis). Quantitative analysis is possible because the amount of light absorbed by a sample depends on the concentration of the absorbing substance within the sample. For example, the concentration of Ca^{2+} in a hard water sample can be determined by measuring the quantity of light absorbed by the calcium ion at its characteristic wavelength.



KEY CONCEPT VIDEO
The Wave Nature of Matter

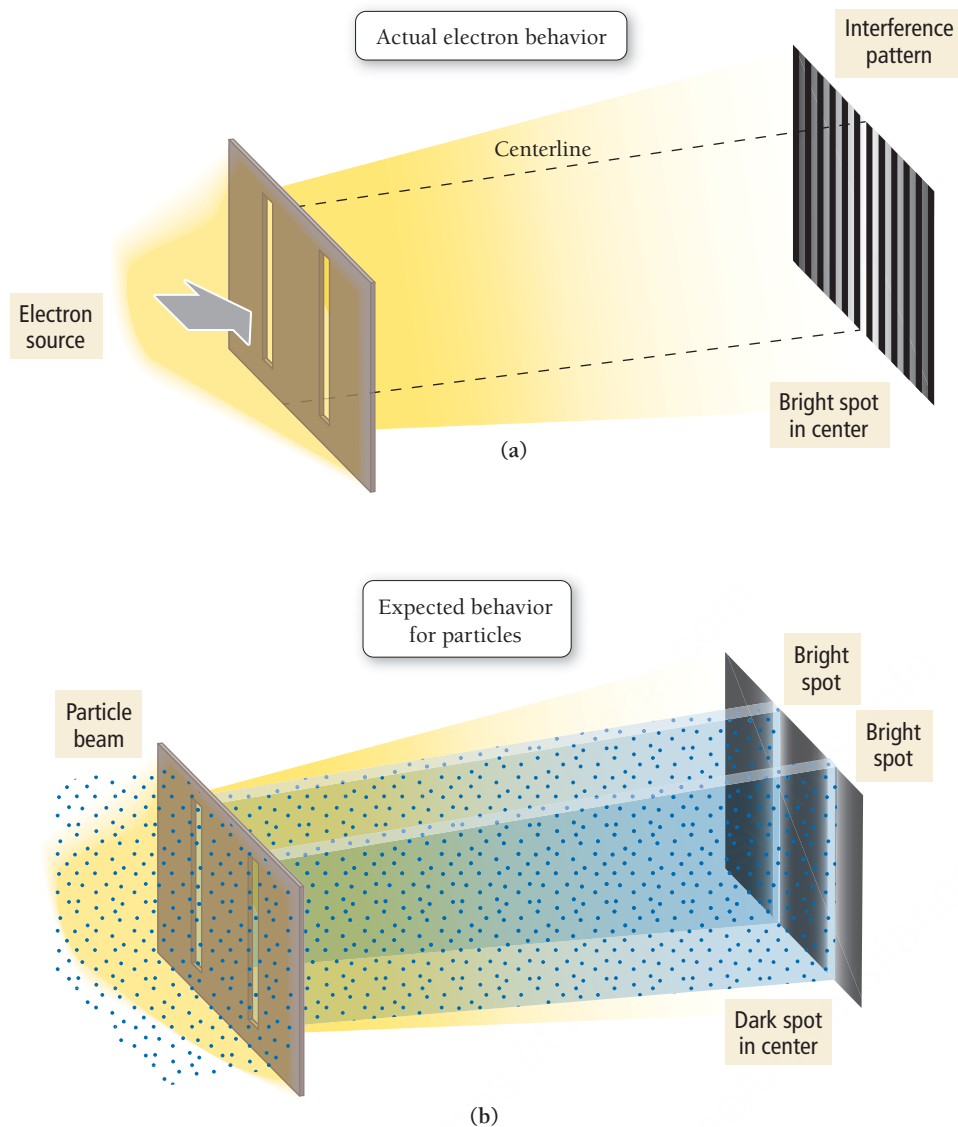
The first evidence of electron wave properties was provided by the Davisson-Germer experiment of 1927, in which electrons were observed to undergo diffraction by a metal crystal.

For interference to occur, the spacing of the slits has to be on the order of atomic dimensions.

2.4 The Wave Nature of Matter: The de Broglie Wavelength, the Uncertainty Principle, and Indeterminacy

The heart of the quantum-mechanical theory that replaced Bohr's model is the wave nature of the electron, first proposed by Louis de Broglie (1892–1987) in 1924 and later confirmed by experiments in 1927. It seemed incredible at the time, but electrons—which were then thought of only as particles and known to have mass—also have a wave nature. The wave nature of the electron is seen most clearly in its diffraction. If an electron beam is aimed at two closely spaced slits, and a series (or array) of detectors is arranged to detect the electrons after they pass through the slits, an interference pattern similar to that observed for light is recorded behind the slits (**Figure 2.16a ►**). The detectors at the center of the array (midway between the two slits) detect a large number of electrons—exactly the opposite of what you would expect for particles (**Figure 2.16b ►**). Moving outward from this center spot, the detectors alternately detect small numbers of electrons and then large numbers again and so on, forming an interference pattern characteristic of waves.

Counter to what might be our initial intuition about electron interference, the interference pattern is *not caused by pairs of electrons interfering with each other, but rather by single electrons interfering with themselves*. If the electron source is turned down to a very low level, so that electrons come out only one at a time, *the interference pattern remains*. In other words, we can design an experiment in which electrons come out of the source singly. We can then record where each electron strikes the detector after it has passed through the slits. If we individually record the positions of thousands of electrons over a long period of time, we find the same interference pattern shown in Figure 2.16a. This leads us to an important conclusion: *The wave nature of the electron is an inherent property of individual electrons*. In this case, the unobserved electron goes through both slits—it exists in two states simultaneously, just like Schrödinger's cat—and interferes with itself. As it turns out, this wave nature explains the existence of stationary states (in the Bohr model) and prevents the electrons in an atom from crashing into the nucleus as predicted by classical physics. We now turn to three important manifestations of the electron's wave nature: the de Broglie wavelength, the uncertainty principle, and indeterminacy.



▲ FIGURE 2.16 Electron Diffraction When a beam of electrons goes through two closely spaced slits **(a)**, an interference pattern is created, as if the electrons were waves. By contrast, a beam of particles passing through two slits **(b)** produces two smaller beams of particles. Particle beams produce two bright stripes with darkness in between, but waves produce the brightest strip directly in the center of the screen.

The de Broglie Wavelength

As we have seen, a single electron traveling through space has a wave nature; its wavelength is related to its kinetic energy (the energy associated with its motion). The faster the electron is moving, the higher its kinetic energy and the shorter its wavelength. The wavelength (λ) of an electron of mass m moving at velocity v is given by the **de Broglie relation**:

$$\lambda = \frac{h}{mv} \text{ de Broglie relation} \quad [2.4]$$

where h is Planck's constant. Notice that the velocity of a moving electron is related to its wavelength—knowing one is equivalent to knowing the other.

The mass of an object (m) times its velocity (v) is its momentum. Therefore, the wavelength of an electron is inversely proportional to its momentum.

EXAMPLE 2.4

de Broglie Wavelength

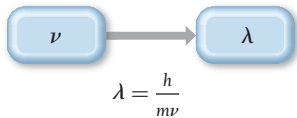
Calculate the wavelength of an electron traveling with a speed of $2.65 \times 10^6 \text{ m/s}$.

SORT You are given the speed of an electron and asked to calculate its wavelength.

GIVEN: $v = 2.65 \times 10^6 \text{ m/s}$
FIND: λ

STRATEGIZE The conceptual plan shows how the de Broglie relation relates the wavelength of an electron to its mass and velocity.

CONCEPTUAL PLAN



RELATIONSHIPS USED

$\lambda = h/mv$ (de Broglie relation, Equation 2.4)

SOLVE Substitute the velocity, Planck's constant, and the mass of an electron to calculate the electron's wavelength. To correctly cancel the units, break down the J in Planck's constant into its SI base units ($1 \text{ J} = 1 \text{ kg} \cdot \text{m}^2/\text{s}^2$).

SOLUTION

$$\begin{aligned} \lambda &= \frac{h}{mv} = \frac{6.626 \times 10^{-34} \frac{\text{kg} \cdot \text{m}^2}{\text{s}^2}}{(9.11 \times 10^{-31} \text{ kg}) 2.65 \times 10^6 \frac{\text{m}}{\text{s}}} \\ &= 2.74 \times 10^{-10} \text{ m} \end{aligned}$$

CHECK The units of the answer (m) are correct. The magnitude of the answer is very small, as we would expect for the wavelength of an electron.

FOR PRACTICE 2.4

What is the velocity of an electron that has a de Broglie wavelength approximately the length of a chemical bond? Assume this length to be $1.2 \times 10^{-10} \text{ m}$.



2.3
Cc

Conceptual
Connection

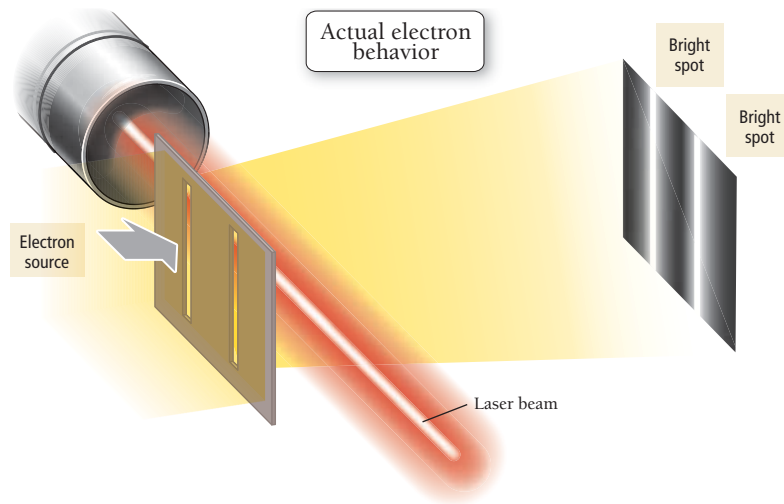
The de Broglie Wavelength of Macroscopic Objects

Since quantum-mechanical theory is universal, it applies to all objects, regardless of size. Therefore, according to the de Broglie relation, a thrown baseball should also exhibit wave properties. Why don't we observe such properties at the ballpark?

The Uncertainty Principle

The wave nature of the electron is difficult to reconcile with its particle nature. How can a single entity behave as both a wave and a particle? We can begin to address this question by returning to the single-electron diffraction experiment. Specifically, we can ask the question: How does a single electron aimed at a double slit produce an interference pattern? We stated previously that the electron travels through both slits and interferes with itself. This idea is testable. We simply have to observe the single electron as it travels through both of the slits. If it travels through both slits simultaneously, our hypothesis is correct. But here is where nature gets tricky.

Any experiment designed to observe the electron as it travels through the slits results in the detection of an electron "particle" traveling through a single slit and no interference pattern. Recall from Section 2.1 that an *unobserved* electron can occupy two different states; however, the act of observation forces it into one state or the other. Similarly, the act of observing the electron as it travels through both slits forces it to go through only one slit. The electron diffraction experiment shown here is designed to observe which slit the electron travels through by using a laser beam placed directly behind the slits.



An electron that crosses the laser beam produces a tiny “flash” when a single photon is scattered at the point of crossing. If a flash shows up behind a particular slit, that indicates an electron is passing through that slit. When the experiment is performed, the flash always originates either from one slit *or* the other, but *never* from both at once. Furthermore, the interference pattern, which was present without the laser, is now absent. With the laser on, the electrons hit positions directly behind each slit, as if they were ordinary particles; their wavelike behavior is no longer manifested.

As it turns out, no matter how hard we try, or whatever method we set up, *we can never both see the interference pattern and simultaneously determine which hole the electron goes through*. It has never been done, and most scientists agree that it never will. In the words of P. A. M. Dirac (1902–1984):

There is a limit to the fineness of our powers of observation and the smallness of the accompanying disturbance—a limit which is inherent in the nature of things and can never be surpassed by improved technique or increased skill on the part of the observer.

The single-electron diffraction experiment demonstrates that we cannot simultaneously observe both the wave nature and the particle nature of the electron. When we try to observe which hole the electron goes through (associated with the particle nature of the electron), we lose the interference pattern (associated with the wave nature of the electron). When we try to observe the interference pattern, we cannot determine which hole the electron goes through. The wave nature and particle nature of the electron are said to be **complementary properties**. Complementary properties exclude one another—the more we know about one, the less we know about the other. Which of two complementary properties we observe depends on the experiment we perform—in quantum mechanics, the observation of an event affects its outcome.

As we just saw in the de Broglie relation, the *velocity* of an electron is related to its *wave nature*. The *position* of an electron, however, is related to its *particle nature*. (Particles have well-defined positions, but waves do not.) Consequently, our inability to observe the electron simultaneously as both a particle and a wave means that *we cannot simultaneously measure its position and its velocity with infinite precision*. Werner Heisenberg formalized this idea with the equation:

$$\Delta x \times m\Delta v \geq \frac{h}{4\pi} \quad \text{Heisenberg's uncertainty principle} \quad [2.5]$$

where Δx is the uncertainty in the position, Δv is the uncertainty in the velocity, m is the mass of the particle, and h is Planck's constant. **Heisenberg's uncertainty principle** states that the product of Δx and $m\Delta v$ must be greater than or equal to a finite number ($h/4\pi$). In other words, the more accurately you know the position of an electron (the smaller Δx), the less accurately you can know its velocity (the bigger Δv) and vice versa. The complementarity of the wave nature and particle nature of the electron results in the complementarity of velocity and position.



▲ Werner Heisenberg (1901–1976)

Remember that velocity includes speed as well as direction of travel.

Although Heisenberg's uncertainty principle may seem puzzling, it actually solves a great puzzle. Without the uncertainty principle, we are left with a paradox: How can something be *both* a particle and a wave? Saying that an object is both a particle and a wave is like saying that an object is both a circle and a square—a contradiction. Heisenberg solved the contradiction by introducing complementarity—an electron is observed as *either* a particle or a wave, but never both at once. This idea is captured by Schrödinger's thought experiment about the cat explained in Section 2.1: When observed, the cat is either dead or alive, not both.

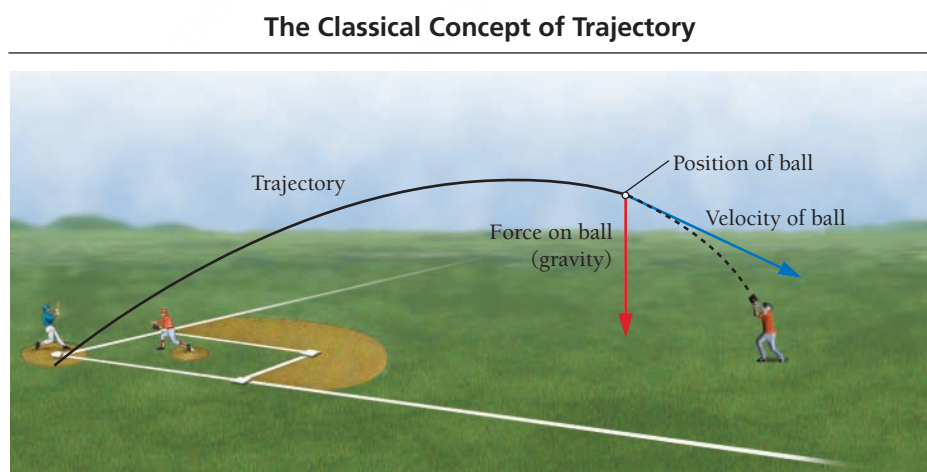
Indeterminacy and Probability Distribution Maps

According to classical physics, and in particular Newton's laws of motion, particles move in a *trajectory* (or path) that is determined by the particle's velocity (the speed and direction of travel), its position, and the forces acting on it. Even if you are not familiar with Newton's laws, you probably have an intuitive sense of them. For example, when you chase a baseball in the outfield, you visually predict where the ball will land by observing its path. You do this by noting its initial position and velocity, watching how these are affected by the forces acting on it (gravity, air resistance, wind), and then inferring its trajectory, as shown in **Figure 2.17** ▼. If you knew only the ball's velocity, or only its position (imagine a still photo of the baseball in the air), you could not predict its landing spot. In classical mechanics, both position and velocity are required to predict a trajectory.


Newton's laws of motion are **deterministic**—the present *determines* the future. This means that if two baseballs are hit consecutively with the same velocity from the same position under identical conditions, they will land in exactly the same place. The same is not true of electrons. We have just seen that we cannot simultaneously know the position and velocity of an electron; therefore, we cannot know its trajectory. In quantum mechanics, trajectories are replaced with *probability distribution maps*, as shown in **Figure 2.18** ▼. A probability distribution map is a statistical map that shows where an electron is likely to be found under a given set of conditions.

To understand the concept of a probability distribution map, let us return to baseball. Imagine a baseball thrown from the pitcher's mound to a catcher behind home plate (**Figure 2.19** ►). The catcher can watch the baseball's path, predict exactly where it will cross home plate, and place his mitt in the correct

► **FIGURE 2.17 The Concept of Trajectory** In classical mechanics, the position and velocity of a particle determine its future trajectory, or path. Thus, an outfielder can catch a baseball by observing its position and velocity, allowing for the effects of forces acting on it, such as gravity, and estimating its trajectory. (For simplicity, air resistance and wind are not shown.)

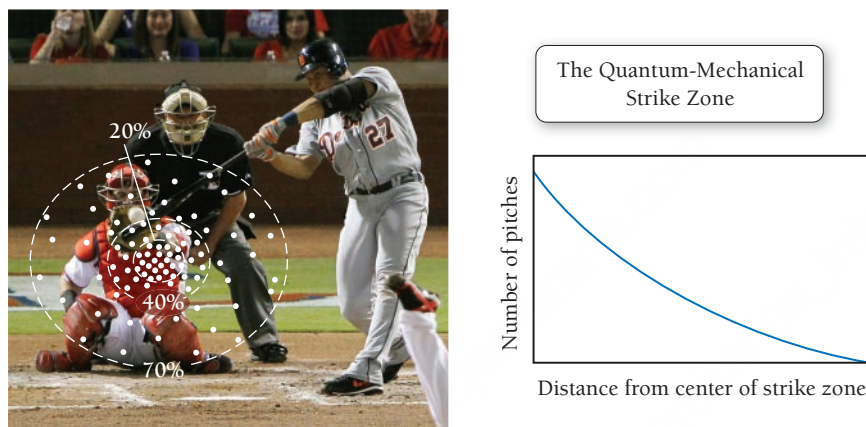


► **FIGURE 2.18 Trajectory versus Probability** In quantum mechanics, we cannot calculate deterministic trajectories. Instead, it is necessary to think in terms of probability maps: statistical pictures of where a quantum-mechanical particle, such as an electron, is most likely to be found. In this hypothetical map, darker shading indicates greater probability.



place to catch it. As we have seen, the same predictions cannot be made for an electron. If an electron were thrown from the pitcher's mound to home plate, it would land in a different place every time, even if it were thrown in exactly the same way. This behavior is called **indeterminacy**. Unlike a baseball, whose future path is *determined* by its position and velocity when it leaves the pitcher's hand, the future path of an electron is indeterminate and can only be described statistically.

In the quantum-mechanical world of the electron, the catcher cannot know exactly where the electron will cross the plate for any given throw. However, if he were to record hundreds of identical electron throws, the catcher would observe a reproducible, *statistical pattern* of where the electron crosses the plate. He could even draw a map of the strike zone showing the probability of an electron crossing a certain area, as shown in **Figure 2.20** ▼. This would be a probability distribution map. In the sections that follow, we discuss quantum-mechanical electron *orbitals*, which are essentially probability distribution maps for electrons as they exist within atoms.



▲ **FIGURE 2.20 The Quantum-Mechanical Strike Zone** An electron does not have a well-defined trajectory. However, we can construct a probability distribution map to show the relative probability of it crossing home plate at different points.


2.5 Quantum Mechanics and the Atom

As we have seen, the position and velocity of the electron are complementary properties—if we know one accurately, the other becomes indeterminate. Since velocity is directly related to energy (recall that kinetic energy equals $\frac{1}{2}mv^2$), position and *energy* are also complementary properties—the more we know about one, the less we know about the other. Many of the properties of an element, however, depend on the energies of its electrons. In the following paragraphs, we describe the probability distribution maps for electron states in which the electron has well-defined energy, but not well-defined position. In other words, for each of these states, we can specify the *energy* of the electron precisely, but not its location at a given instant. Instead, the electron's position is described in terms of an **orbital**, a probability distribution map showing where the electron is likely to be found. Since chemical bonding often involves the sharing of electrons between atoms (see Section 4.2), the spatial distribution of atomic electrons is important to bonding.

The mathematical derivation of energies and orbitals for electrons in atoms comes from solving the *Schrödinger* equation for the atom of interest. The general form of the Schrödinger equation is:

$$H\psi = E\psi$$

The symbol H stands for the Hamiltonian operator, a set of mathematical operations that represents the total energy (kinetic and potential) of the electron within the atom. The symbol E is the actual energy of the electron. The symbol ψ is the **wave function**, a mathematical function that describes the wavelike nature of the electron. A plot of the wave function squared (ψ^2) represents an orbital, a probability density distribution map of the electron.



▲ **FIGURE 2.19 Trajectory of a Macroscopic Object** A baseball follows a well-defined trajectory from the hand of the pitcher to the mitt of the catcher.



KEY CONCEPT VIDEO
**Quantum Mechanics
and the Atom: Orbitals
and Quantum Numbers**

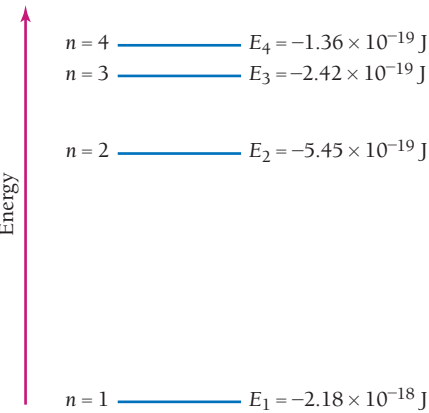
These states are known as energy *eigenstates*.

An operator is different from a normal algebraic entity. An operator transforms one mathematical function into another. For example, d/dx is an operator that means “take the derivative of.” When d/dx operates on a function (such as x^2), it returns another function ($2x$).

The symbol ψ is the Greek letter psi, pronounced “sigh.”

Solutions to the Schrödinger Equation for the Hydrogen Atom

When the Schrödinger equation is solved, it yields many solutions—many possible wave functions. The wave functions themselves are fairly complicated mathematical functions, and we do not examine them in detail in this book. Instead, we will introduce graphical representations (or plots) of the orbitals that correspond to the wave functions. Each orbital is specified by three interrelated **quantum numbers**: n , the **principal quantum number**; l , the **angular momentum quantum number** (sometimes called the *azimuthal quantum number*); and m_l , the **magnetic quantum number**. These quantum numbers all have integer values, as had been hinted at by both the Rydberg equation and Bohr’s model. A fourth quantum number, m_s , the **spin quantum number**, specifies the orientation of the spin of the electron. We examine each of these quantum numbers individually.



The Principal Quantum Number (n) The principal quantum number is an integer that determines the overall size and energy of an orbital. Its possible values are $n = 1, 2, 3, \dots$ and so on. For the hydrogen atom, the energy of an electron in an orbital with quantum number n is given by:

$$E_n = -2.18 \times 10^{-18} \text{ J} \left(\frac{1}{n^2} \right) \quad (n = 1, 2, 3, \dots) \tag{2.6}$$

The energy is negative because the electron’s energy is lowered (made more negative) by its interaction with the nucleus (see the description of Coulomb’s law in Section 3.3). The constant, $2.18 \times 10^{-18} \text{ J}$, is the Rydberg constant for hydrogen times Planck’s constant times the speed of light (R_Hhc). Notice that orbitals with higher values of n have greater (less negative) energies, as shown in the energy level diagram at left. Notice also that, as n increases, the spacing between the energy levels becomes smaller.

The Angular Momentum Quantum Number (l) The angular momentum quantum number is an integer that determines the shape of the orbital. We consider these shapes in Section 2.6. The possible values of l are $0, 1, 2, \dots, (n-1)$. In other words, for a given value of n , l can be any integer (including 0) up to $(n-1)$. For example, if $n = 1$, then the only possible value of l is 0; if $n = 2$, the possible values of l are 0 and 1. In order to avoid confusion between n and l , values of l are often assigned letters as follows:

Value of l	Letter Designation
$l = 0$	s
$l = 1$	p
$l = 2$	d
$l = 3$	f

The values of l beyond 3 are designated with letters in alphabetical order so that $l = 4$ is designated g , $l = 5$ is designated h , and so on.



2.4 Cc

Conceptual Connection

The Relationship between n and l

- What values of l are possible for $n = 3$?
- (a) 0 (or s)

(b) 0 and 1 (or s and p)

(c) 0, 1, and 2 (or s , p , and d)

(d) 0, 1, 2, and 3 (or s , p , d , and f)

The Magnetic Quantum Number (m_l) The magnetic quantum number is an integer that specifies the orientation of the orbital. We will consider these orientations in Section 2.6. The possible values of m_l are the integer values (including zero) ranging from $-l$ to $+l$. For example, if $l = 0$, then the only possible value of m_l is 0; if $l = 1$, the possible values of m_l are $-1, 0$, and $+1$; if $l = 2$, the possible values of m_l are $-2, -1, 0, +1, +2$, and so on.

The Relationship between l and m_l

What values of m_l are possible for $l = 2$?

- (a) 0, 1, and 2 (b) 0 (c) -1, 0, and +1 (d) -2, -1, 0, +1, and +2

2.5
Cc

Conceptual
Connection

PEARSON
eText
2.0

The Spin Quantum Number (m_s) The spin quantum number specifies the orientation of the *spin* of the electron. **Electron spin** is a fundamental property of an electron (like its negative charge). One electron does not have more or less spin than another—all electrons have the same amount of spin. The orientation of the electron's spin is quantized, with only two possibilities that we can call spin up ($m_s = +\frac{1}{2}$) and spin down ($m_s = -\frac{1}{2}$). The spin quantum becomes important in Section 3.3 when we begin to consider how electrons occupy orbitals. For now, we will focus on the first three quantum numbers.

Each specific combination of the first three quantum numbers (n , l , and m_l) specifies one atomic orbital. For example, the orbital with $n = 1$, $l = 0$, and $m_l = 0$ is known as the 1s orbital. The 1 in 1s is the value of n , and the s specifies that $l = 0$. There is only one 1s orbital in an atom, and its m_l value is zero. Orbitals with the same value of n are said to be in the same **principal level** (or **principal shell**). Orbitals with the same value of n and l are said to be in the same **sublevel** (or **subshell**). The diagram at right shows all of the orbitals, each represented by a small square, in the first three principal levels.

For example, the $n = 2$ level contains the $l = 0$ and $l = 1$ sublevels. Within the $n = 2$ level, the $l = 0$ sublevel—called the 2s sublevel—contains only one orbital (the 2s orbital), with $m_l = 0$. The $l = 1$ sublevel—called the 2p sublevel—contains three 2p orbitals, with $m_l = -1, 0, +1$.

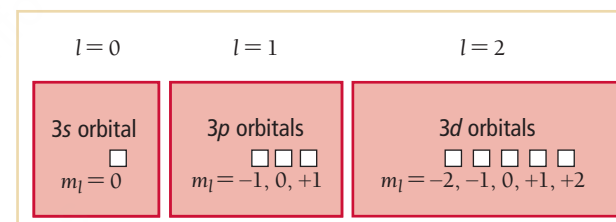
In general, notice the following:

- The number of sublevels in any level is equal to n , the principal quantum number. Therefore, the $n = 1$ level has one sublevel, the $n = 2$ level has two sublevels, etc.
- The number of orbitals in any sublevel is equal to $2l + 1$. Therefore, the s sublevel ($l = 0$) has one orbital, the p sublevel ($l = 1$) has three orbitals, the d sublevel ($l = 2$) has five orbitals, etc.
- The number of orbitals in a level is equal to n^2 . Therefore, the $n = 1$ level has one orbital, the $n = 2$ level has four orbitals, the $n = 3$ level has nine orbitals, etc.

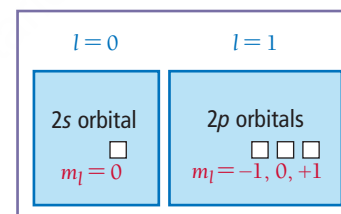
Principal level
(specified by n)

Sublevel
(specified by l)

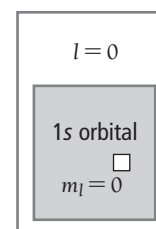
$n = 3$



$n = 2$



$n = 1$



EXAMPLE 2.5

Quantum Numbers I

What are the quantum numbers and names (for example, 2s, 2p) of the orbitals in the $n = 4$ principal level? How many $n = 4$ orbitals exist?

SOLUTION

First determine the possible values of l (from the given value of n). Then determine the possible values of m_l for each possible value of l . For a given value of n , the possible values of l are 0, 1, 2, ..., ($n - 1$).

$n = 4$; therefore $l = 0, 1, 2$, and 3

Interactive
Worked Example
Video 2.5

PEARSON
eText
2.0

—Continued on the next page

Continued from the previous page—

For a given value of l , the possible values of m_l are the integer values including zero ranging from $-l$ to $+l$. The name of an orbital is its principal quantum number (n) followed by the letter corresponding to the value l . The total number of orbitals is given by n^2 .

l	Possible m_l Values	Orbital name(s)
0	0	4s (1 orbital)
1	-1, 0, +1	4p (3 orbitals)
2	-2, -1, 0, +1, +2	4d (5 orbitals)
3	-3, -2, -1, 0, +1, +2, +3	4f (7 orbitals)
Total number of orbitals = $4^2 = 16$		

FOR PRACTICE 2.5

List the quantum numbers associated with all of the 5d orbitals. How many 5d orbitals exist?

EXAMPLE 2.6

Quantum Numbers II

These sets of quantum numbers are each supposed to specify an orbital. One set, however, is erroneous. Which one and why?

- (a) $n = 3; l = 0; m_l = 0$
- (b) $n = 2; l = 1; m_l = -1$
- (c) $n = 1; l = 0; m_l = 0$
- (d) $n = 4; l = 1; m_l = -2$

SOLUTION

Choice (d) is erroneous because, for $l = 1$, the possible values of m_l are only $-1, 0$, and $+1$.

FOR PRACTICE 2.6

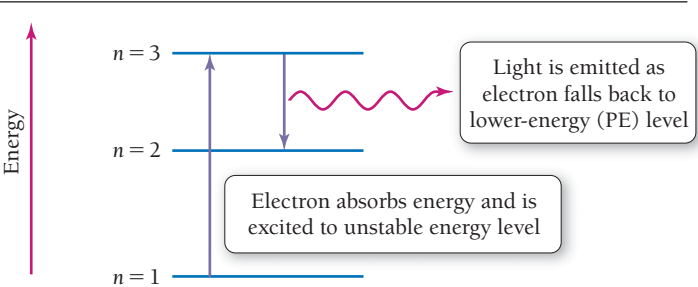
Each set of quantum numbers is supposed to specify an orbital. However, each set contains one quantum number that is not allowed. Replace the quantum number that is not allowed with one that is allowed.

- (a) $n = 3; l = 3; m_l = +2$
- (b) $n = 2; l = 1; m_l = -2$
- (c) $n = 1; l = 1; m_l = 0$

Atomic Spectroscopy Explained

Quantum theory explains the atomic spectra of atoms discussed in Section 2.3. Each wavelength in the emission spectrum of an atom corresponds to an electron *transition* between quantum-mechanical orbitals. When an atom absorbs energy, an electron in a lower-energy orbital is *excited* or promoted to a higher-energy orbital, as shown in **Figure 2.21** ▼. In this new configuration, however, the atom is unstable, and the electron quickly falls back or *relaxes* to a lower-energy orbital. As it does so, it releases a photon of light containing an amount of energy precisely equal to the energy difference between the two energy levels. We saw previously (see Equation 2.6) that the energy of an orbital with principal quantum number n is given by $E_n = -2.18 \times 10^{-18} \text{ J}(1/n^2)$, where $n = 1, 2, 3, \dots$. Therefore, the *difference* in energy between the two levels n_{initial} and n_{final} is given by $\Delta E = E_{\text{final}} - E_{\text{initial}}$.

Excitation and Radiation



► **FIGURE 2.21** **Excitation and Radiation** When an atom absorbs energy, an electron can be excited from an orbital in a lower-energy level to an orbital in a higher-energy level. The electron in this “excited state” is unstable, however, and relaxes to a lower-energy level, releasing energy in the form of electromagnetic radiation.

If we substitute the expression for E_n into the expression for ΔE , we get the following expression for the change in energy that occurs in an atom when an electron changes energy levels:

$$\begin{aligned}\Delta E &= E_{\text{final}} - E_{\text{initial}} \\ &= -2.18 \times 10^{-18} \text{ J} \left(\frac{1}{n_f^2} \right) - \left[-2.18 \times 10^{-18} \text{ J} \left(\frac{1}{n_i^2} \right) \right] \\ \Delta E &= -2.18 \times 10^{-18} \text{ J} \left(\frac{1}{n_f^2} - \frac{1}{n_i^2} \right) \quad [2.7]\end{aligned}$$

For example, suppose that an electron in a hydrogen atom relaxes from an orbital in the $n = 3$ level to an orbital in the $n = 2$ level. Then ΔE , the energy difference corresponding to the transition from $n = 3$ to $n = 2$, is determined as follows:

$$\begin{aligned}\Delta E_{\text{atom}} &= E_2 - E_3 \\ &= 2.18 \times 10^{-18} \text{ J} \left(\frac{1}{2^2} \right) - \left[-2.18 \times 10^{-18} \text{ J} \left(\frac{1}{3^2} \right) \right] \\ &= -2.18 \times 10^{-18} \text{ J} \left(\frac{1}{2^2} - \frac{1}{3^2} \right) \\ &= -3.03 \times 10^{-19} \text{ J}\end{aligned}$$

The energy carries a negative sign because the atom *emits* the energy as it relaxes from $n = 3$ to $n = 2$. Since energy must be conserved, the exact amount of energy emitted by the atom is carried away by the photon:

$$\Delta E_{\text{atom}} = -E_{\text{photon}}$$

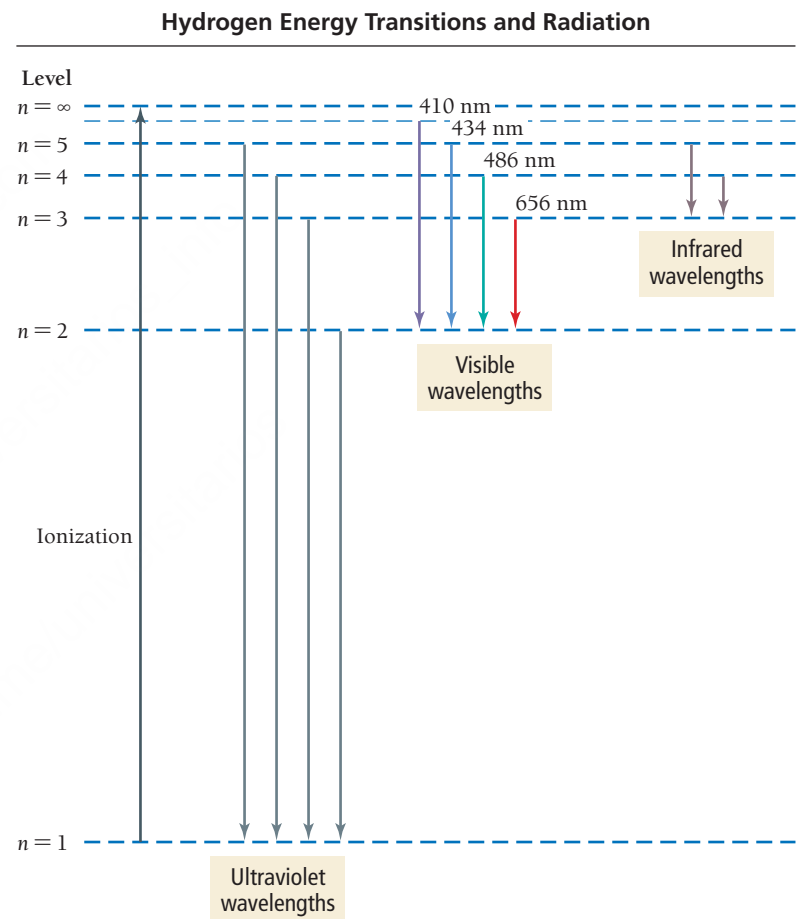
This energy determines the frequency and wavelength of the photon. Since the wavelength of the photon is related to its energy as $E = hc/\lambda$, we calculate the wavelength of the photon as:

$$\begin{aligned}\lambda &= \frac{hc}{E} \\ &= \frac{(6.626 \times 10^{-34} \text{ J} \cdot \text{s})(3.00 \times 10^8 \text{ m/s})}{3.03 \times 10^{-19} \text{ J}} \\ &= 6.56 \times 10^{-7} \text{ m} \quad \text{or} \quad 656 \text{ nm}\end{aligned}$$

Consequently, the light emitted by an excited hydrogen atom as it relaxes from an orbital in the $n = 3$ level to an orbital in the $n = 2$ level has a wavelength of 656 nm (red). Similarly, we can calculate the light emitted due to a transition from $n = 4$ to $n = 2$ to be 486 nm (green). Notice that transitions between orbitals that are further apart in energy produce light that is higher in energy, and therefore shorter in wavelength, than transitions between orbitals that are closer together.

Figure 2.22 ► shows several of the transitions in the hydrogen atom and their corresponding wavelengths.

The Rydberg equation, $1/\lambda = R(1/m^2 - 1/n^2)$, can be derived from the relationships just covered. We leave this derivation to an exercise (see Problem 2.96).



▲ FIGURE 2.22 Hydrogen Energy Transitions and Radiation An atomic energy level diagram for hydrogen, showing some possible electron transitions between levels and the corresponding wavelengths of emitted light.

Emission Spectra

2.6

Cc

Conceptual Connection

PEARSON
eText
2.0

Which transition results in emitted light with the shortest wavelength?

(a) $n = 5 \longrightarrow n = 4$

(b) $n = 4 \longrightarrow n = 3$

(c) $n = 3 \longrightarrow n = 2$

EXAMPLE 2.7

Interactive
Worked Example
Video 2.7PEARSON
eText
2.0

Wavelength of Light for a Transition in the Hydrogen Atom

Determine the wavelength of light emitted when an electron in a hydrogen atom makes a transition from an orbital in $n = 6$ to an orbital in $n = 5$.

SORT You are given the energy levels of an atomic transition and asked to find the wavelength of emitted light.

STRATEGIZE In the first part of the conceptual plan, calculate the energy of the electron in the $n = 6$ and $n = 5$ orbitals using Equation 2.6 and subtract to find ΔE_{atom} .

In the second part, find E_{photon} by taking the negative of ΔE_{atom} , and then calculating the wavelength corresponding to a photon of this energy using Equation 2.3. (The difference in sign between E_{photon} and ΔE_{atom} applies only to emission. *The energy of a photon must always be positive.*)

SOLVE Follow the conceptual plan. Begin by calculating ΔE_{atom} .

Calculate E_{photon} by changing the sign of ΔE_{atom} .

Solve the equation relating the energy of a photon to its wavelength for λ . Substitute the energy of the photon and calculate λ .

CHECK The units of the answer (m) are correct for wavelength. The magnitude is reasonable because 10^{-6} m is in the infrared region of the electromagnetic spectrum. You know that transitions from $n = 3$ or $n = 4$ to $n = 2$ lie in the visible region, so it makes sense that a transition between levels of higher n value (which are energetically closer to one another) would result in light of longer wavelength.

FOR PRACTICE 2.7

Determine the wavelength of the light absorbed when an electron in a hydrogen atom makes a transition from an orbital in which $n = 2$ to an orbital in which $n = 7$.

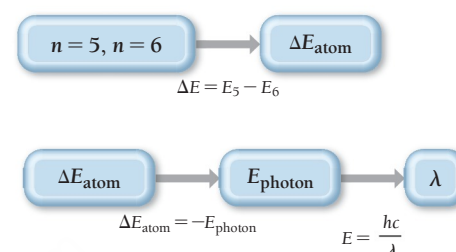
FOR MORE PRACTICE 2.7

An electron in the $n = 6$ level of the hydrogen atom relaxes to a lower-energy level, emitting light of $\lambda = 93.8$ nm. Find the principal level to which the electron relaxed.

GIVEN: $n = 6 \longrightarrow n = 5$

FIND: λ

CONCEPTUAL PLAN



RELATIONSHIPS USED

$$E_n = -2.18 \times 10^{-18} \text{ J}(1/n^2)$$

$$E = hc/\lambda$$

SOLUTION

$$\begin{aligned}
 \Delta E_{\text{atom}} &= E_5 - E_6 \\
 &= -2.18 \times 10^{-18} \text{ J} \left(\frac{1}{5^2} \right) - \left[-2.18 \times 10^{-18} \text{ J} \left(\frac{1}{6^2} \right) \right] \\
 &= -2.18 \times 10^{-18} \text{ J} \left(\frac{1}{5^2} - \frac{1}{6^2} \right) \\
 &= -2.6644 \times 10^{-20} \text{ J}
 \end{aligned}$$

$$E_{\text{photon}} = -\Delta E_{\text{atom}} = +2.6644 \times 10^{-20} \text{ J}$$

$$\begin{aligned}
 E &= \frac{hc}{\lambda} \\
 \lambda &= \frac{hc}{E} \\
 &= \frac{(6.626 \times 10^{-34} \text{ J}\cdot\text{s})(3.00 \times 10^8 \text{ m/s})}{2.6644 \times 10^{-20} \text{ J}} \\
 &= 7.46 \times 10^{-6} \text{ m or } 7460 \text{ nm}
 \end{aligned}$$

2.6 The Shapes of Atomic Orbitals

The shapes of atomic orbitals are important because chemical bonds depend on the sharing of the electrons that occupy these orbitals. In one model of chemical bonding, for example, a bond consists of the overlap of atomic orbitals on adjacent atoms. The shapes of the overlapping orbitals determine the shape of the molecule. Although we limit ourselves in this chapter to the orbitals of the hydrogen atom, we will see in Chapter 3 that the orbitals of all atoms can be approximated as being hydrogen-like and therefore have very similar shapes to those of hydrogen.

The shape of an atomic orbital is determined primarily by l , the angular momentum quantum number. Recall that each value of l is assigned a letter that corresponds to particular orbitals. For example, the orbitals with $l = 0$ are called s orbitals; those with $l = 1$, p orbitals; those with $l = 2$, d orbitals, and so on. We now examine the shape of each of these orbitals.

s Orbitals ($l = 0$)

The lowest energy orbital is the spherically symmetrical $1s$ orbital shown in **Figure 2.23a** ▶. This image is actually a three-dimensional plot of the wave function squared (ψ^2), which represents **probability density**, the probability (per unit volume) of finding the electron at a point in space.

$$\psi^2 = \text{probability density} = \frac{\text{probability}}{\text{unit volume}}$$

The magnitude of ψ^2 in this plot is proportional to the density of the dots shown in the image. The high dot density near the nucleus (at the very center of the plot) indicates a higher probability density for the electron there. As you move away from the nucleus, the probability density decreases. **Figure 2.23b** ▶ shows a plot of probability density (ψ^2) versus r , the distance from the nucleus. The plot represents a slice through the three-dimensional plot of ψ^2 and illustrates how the probability density decreases as r increases.

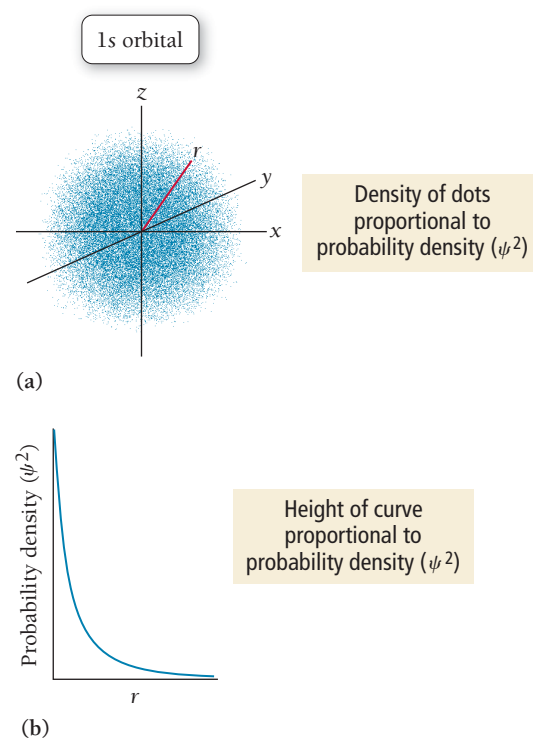
We can understand probability density with the help of a thought experiment. Imagine an electron in the $1s$ orbital located within the volume surrounding the nucleus. Imagine taking a photograph of the electron every second for 10 or 15 minutes. In one photograph, the electron is very close to the nucleus, in another it is farther away, and so on. Each photo has a dot showing the electron's position relative to the nucleus when the photo was taken. Remember that you can never predict where the electron will be for any one photo. However, if you took hundreds of photos and superimposed all of them, you would have a plot similar to Figure 2.23a—a statistical representation of how likely the electron is to be found at each point.

The thought experiment we just engaged in can result in a possible misunderstanding: that the electron is moving around (like a moth near a flame) between photographs. However, in the quantum-mechanical model, that is not the case. Recall from Section 2.1 that the measurement affects the outcome of any quantum system. Between photographs, the location of the electron is uncertain—in a sense its location is spread out over the entire volume of the orbital. Only when the photograph is taken (that is, when a measurement of its location is made) does the location of the electron become localized to one spot. Between measurements, the electron has no single location.

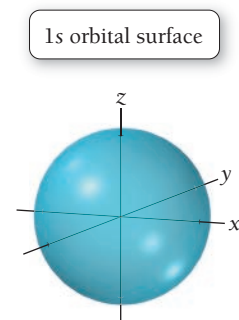
An atomic orbital can also be represented by a geometrical shape that encompasses the volume where the electron is likely to be found most frequently—typically, 90% of the time. For example, the $1s$ orbital can be represented as the three-dimensional sphere shown in **Figure 2.24** ▶. If we were to superimpose the dot-density representation of the $1s$ orbital on the shape representation, 90% of the dots would be within the sphere, meaning that when the electron is in the $1s$ orbital it has a 90% chance of being found within the sphere.

The plots we have just seen represent probability *density*. However, they are a bit misleading because they seem to imply that the electron is most likely to be found *at the nucleus*. To get a better idea of where the electron is most likely to be found, we can use a plot called the **radial distribution function**, shown in **Figure 2.25** ▶ on the next page for the $1s$ orbital. The radial distribution function represents the *total probability of finding the electron within a thin spherical shell at a distance r from the nucleus*.

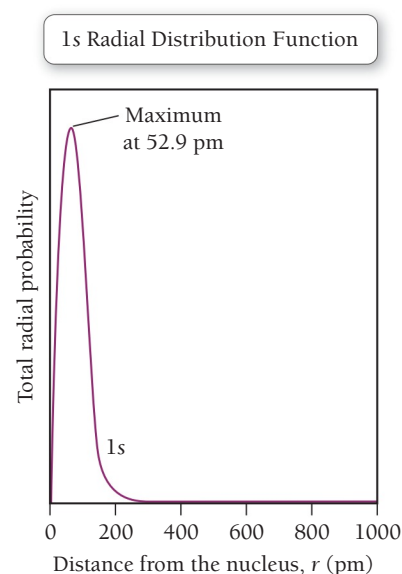
$$\text{total radial probability (at a given } r) = \frac{\text{probability}}{\text{unit volume}} \times \text{volume of shell at } r$$



▲ **FIGURE 2.23 The $1s$ Orbital: Two Representations** In (a) the dot density is proportional to the electron probability density. In (b), the height of the curve is proportional to the electron probability density. The x-axis is r , the distance from the nucleus.



▲ **FIGURE 2.24 The $1s$ Orbital Surface** In this representation, the surface of the sphere encompasses the volume where the electron is found 90% of the time when the electron is in the $1s$ orbital.



▲ **FIGURE 2.25 The Radial Distribution Function for the 1s Orbital** The curve shows the total probability of finding the electron within a thin shell at a distance r from the nucleus.

► The nodes in quantum-mechanical atomic orbitals are three-dimensional analogs of the nodes on a vibrating string.

A nodal plane is a plane where the electron probability density is zero. For example, in the d_{xy} orbitals, the nodal planes lie in the xz and yz planes.

The radial distribution function represents, not probability density at a point r , but total probability at a radius r . In contrast to probability density, which has a maximum at the nucleus, the radial distribution function has a value of zero at the nucleus. It increases to a maximum at 52.9 pm and then decreases again with increasing r . $1 \text{ pm} = 10^{-12} \text{ m}$.

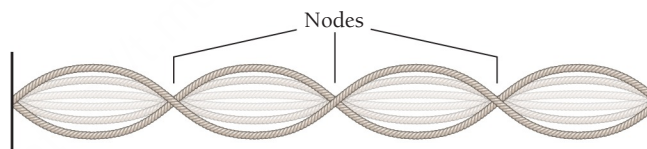
The shape of the radial distribution function is the result of multiplying together two functions with opposite trends in r :

1. The probability density function (ψ^2), which is the probability per unit volume, has a maximum at the nucleus and decreases with increasing r .
2. The volume of the thin shell, which is zero at the nucleus, increases with increasing r .

At the nucleus ($r = 0$), for example, the probability density is at a maximum; however, the volume of a thin spherical shell is zero, so the radial distribution function is zero. As r increases, the volume of the thin spherical shell increases. We can understand this by making an analogy to an onion. A spherical shell at a distance r from the nucleus is like a layer in an onion at a distance r from its center. If the layers of the onion all have the same thickness, then the volume of any one layer—think of this as the total amount of onion in the layer—is greater as r increases. Similarly, the volume of any one spherical shell in the radial distribution function increases with increasing distance from the nucleus, resulting in a greater total probability of finding the electron within that shell. Close to the nucleus, this increase in volume with increasing r outpaces the decrease in probability density, producing a maximum at 52.9 pm. Farther out, however, the density tapers off faster than the volume increases.

The maximum in the radial distribution function, 52.9 pm, turns out to be the very same radius that Bohr had predicted for the innermost orbit of the hydrogen atom. However, there is a significant conceptual difference between the two radii. In the Bohr model, every time you probe the atom (in its lowest energy state), you would find the electron at a radius of 52.9 pm. In the quantum-mechanical model, you would generally find the electron at various radii, with 52.9 pm having the greatest probability.

The probability densities and radial distribution functions for the 2s and 3s orbitals are shown in **Figure 2.26** ►. Like the 1s orbital, these orbitals are spherically symmetric. These orbitals are larger in size than the 1s orbital, and, unlike the 1s orbital, they contain at least one node. A **node** is a point where the wave function (ψ), and therefore the probability density (ψ^2) and radial distribution function, all go through zero. A node in a wave function is much like a node in a standing wave on a vibrating string. We can see nodes in an orbital most clearly by looking at a slice through the orbital. Plots of probability density and the radial distribution function as a function of r both reveal the presence of nodes. The probability of finding the electron at a node is zero.



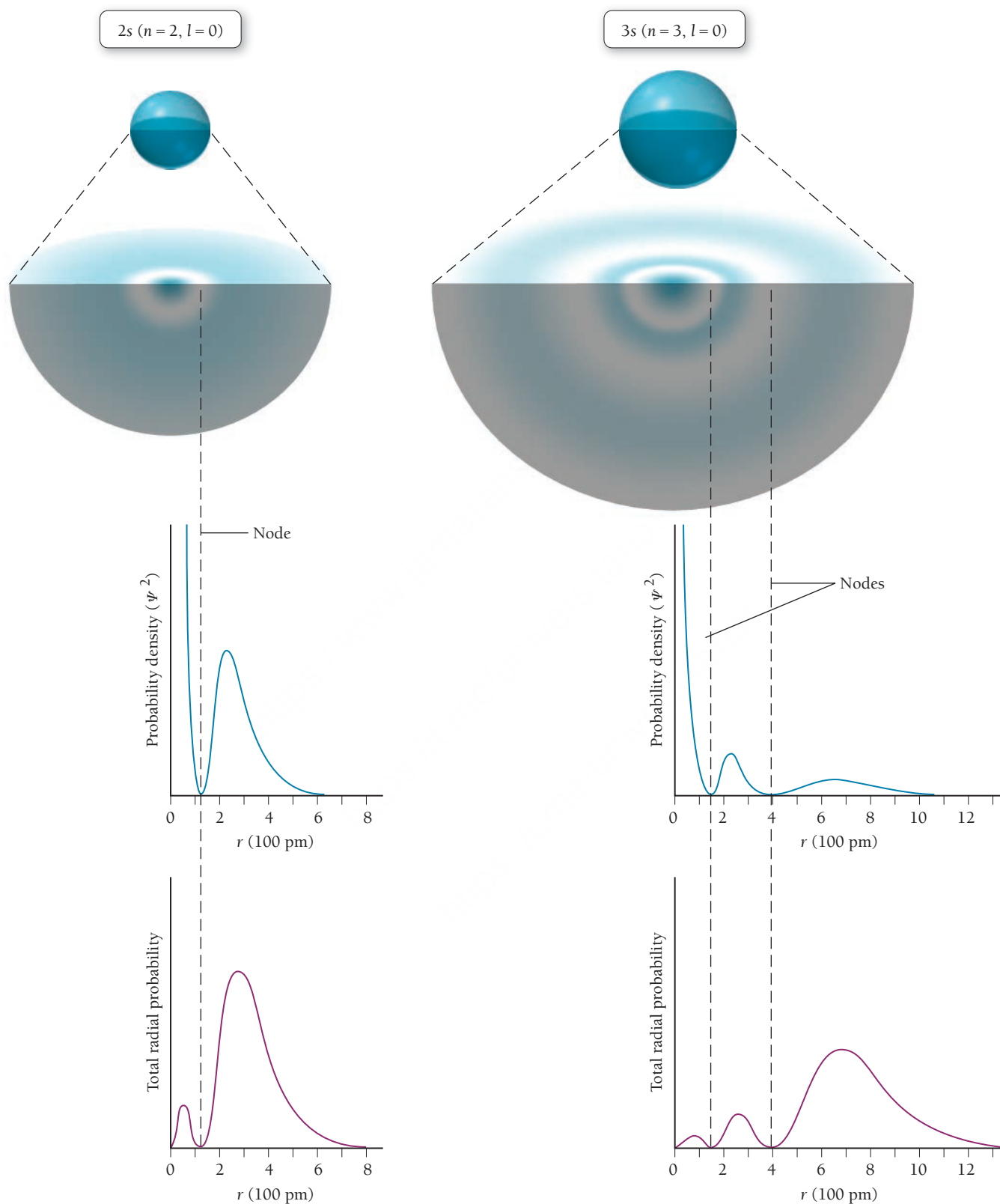
p Orbitals ($l = 1$)

Each principal level with $n = 2$ or greater contains three p orbitals ($m_l = -1, 0, +1$). The three $2p$ orbitals and their radial distribution functions are shown in **Figure 2.27** ► on page 102. The p orbitals are not spherically symmetric like the s orbitals, but have two lobes of electron density on either side of the nucleus and a node located at the nucleus. The three p orbitals differ only in their orientation and are orthogonal (mutually perpendicular) to one another. It is convenient to define an x -, y -, and z -axis system and then label each p orbital as p_x , p_y , and p_z . The $3p$, $4p$, $5p$, and higher p orbitals are all similar in shape to the $2p$ orbitals, but they contain additional nodes (like the higher s orbitals) and are progressively larger in size.

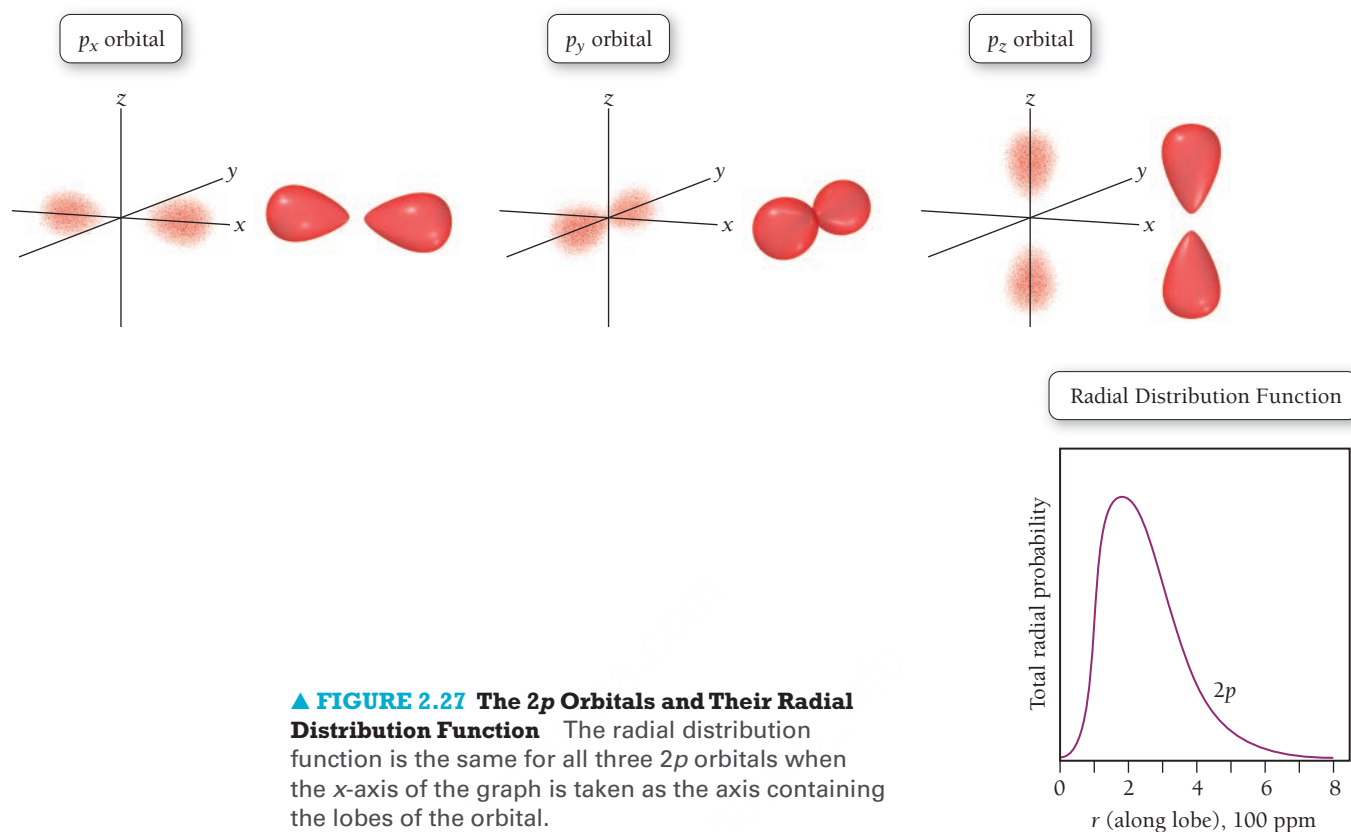
d Orbitals ($l = 2$)

Each principal level with $n = 3$ or greater contains five d orbitals ($m_l = -2, -1, 0, +1, +2$). The five $3d$ orbitals are shown in **Figure 2.28** ► on page 102. Four of these orbitals have a cloverleaf shape, with four lobes of electron density around the nucleus and two perpendicular nodal planes. The d_{xy} , d_{xz} , and d_{yz} orbitals are oriented along the xy , xz , and yz planes, respectively, and their lobes are oriented between the

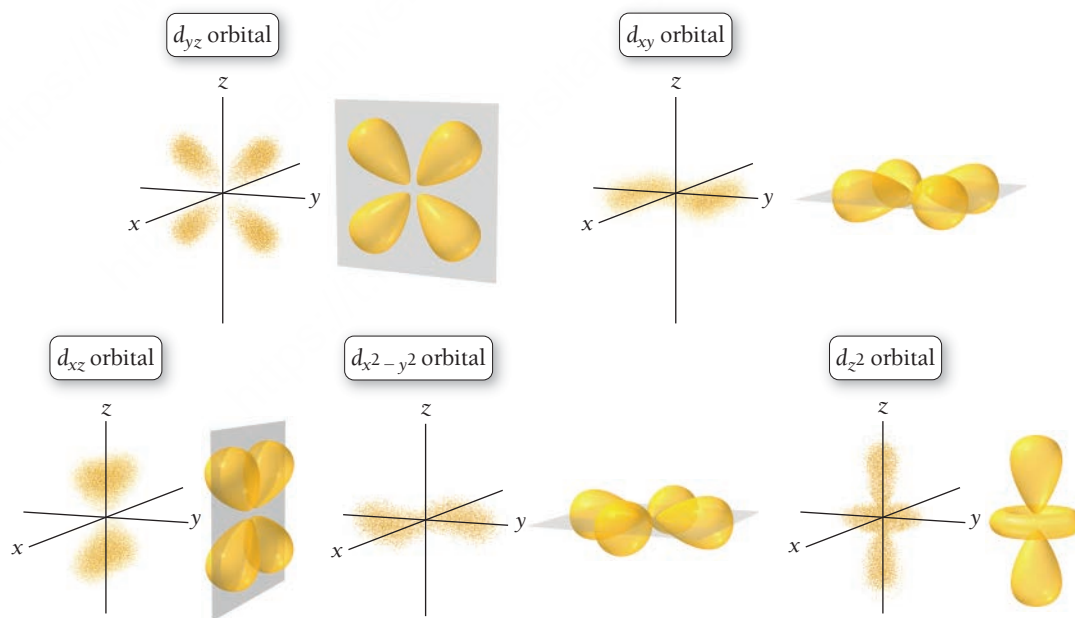
The 2s and 3s Orbitals



▲ **FIGURE 2.26** Probability Densities and Radial Distribution Functions for the 2s and 3s Orbitals



▲ **FIGURE 2.27 The 2p Orbitals and Their Radial Distribution Function** The radial distribution function is the same for all three 2p orbitals when the x-axis of the graph is taken as the axis containing the lobes of the orbital.

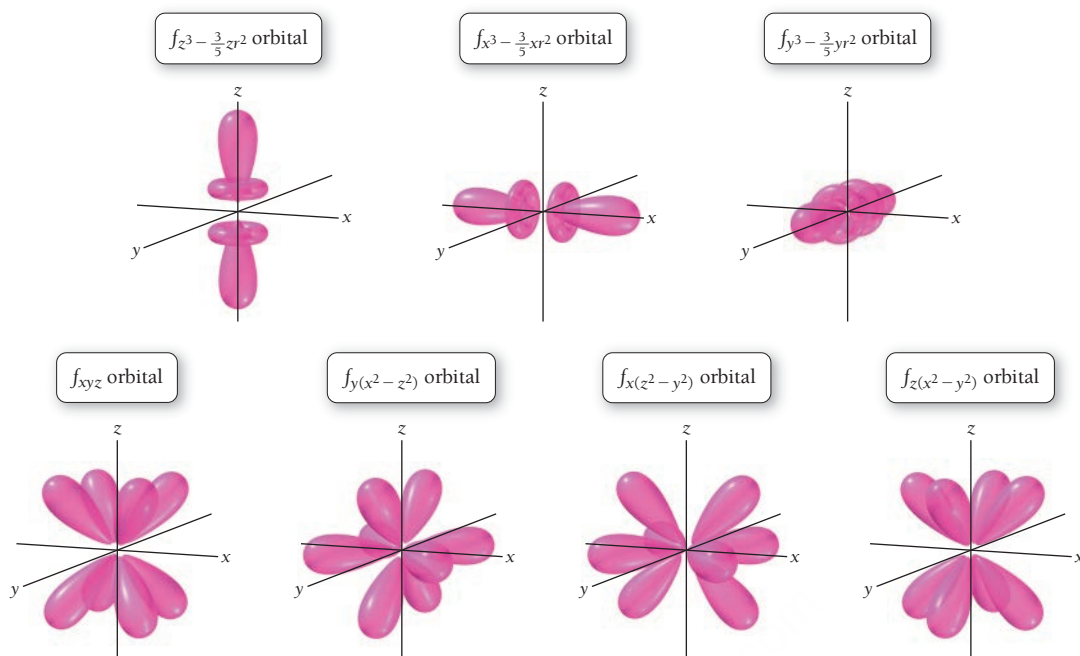


► **FIGURE 2.28 The 3d Orbitals**

corresponding axes. The four lobes of the $d_{x^2-y^2}$ orbital are oriented along the x- and y-axes. The d_{z^2} , etc., orbital is different in shape from the other four, having two lobes oriented along the z-axis and a donut-shaped ring along the xy plane. The 4d, 5d, 6d, etc., orbitals are all similar in shape to the 3d orbitals, but they contain additional nodes and are progressively larger in size.

f Orbitals ($l = 3$)

Each principal level with $n = 4$ or greater contains seven f orbitals ($m_l = -3, -2, -1, 0, +1, +2, +3$) as shown in **Figure 2.29** ►. These f orbitals have more lobes and nodes than d orbitals.



◀ **FIGURE 2.29** The 4f Orbitals

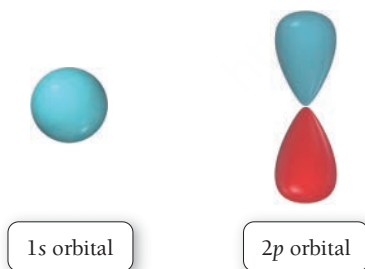
The Phase of Orbitals

The orbitals we have just shown are three-dimensional waves. We can understand an important property of these orbitals by analogy to one-dimensional waves. Consider the following one-dimensional waves:



The wave on the left has a positive amplitude over its entire length, while the wave on the right has a positive amplitude over half of its length and a negative amplitude over the other half. The sign of the amplitude of a wave—positive or negative—is known as its **phase**. In these images, blue indicates positive phase and red indicates negative phase. The phase of a wave determines how it interferes with another wave, as we saw in Section 2.2.

Just as a one-dimensional wave has a phase, so does a three-dimensional wave. We often represent the phase of a quantum-mechanical orbital with color. For example, the phase of a 1s and 2p orbital can be represented as:



In these depictions, blue represents positive phase and red represents negative phase. The 1s orbital is all one phase, while the 2p orbital exhibits two different phases. The phase of quantum-mechanical orbitals is important in bonding, as we shall see in Chapter 6.

The Shape of Atoms

If some orbitals are shaped like dumbbells and three-dimensional cloverleaves, and if most of the volume of an atom is empty space diffusely occupied by electrons in these orbitals, then why do we often depict atoms as spheres? Atoms are usually drawn as spheres because most atoms contain many electrons occupying a number of different orbitals. Therefore, the shape of an atom is obtained by superimposing all of its orbitals. If we superimpose the s, p, and d orbitals, we get a spherical shape, as shown in **Figure 2.30** ▶.






▲ **FIGURE 2.30** Why Atoms Are Depicted as Spherical Atoms are depicted as spherical because all the orbitals together make up a spherical shape.

SELF-ASSESSMENT

QUIZ



- Which wavelength of light has the highest frequency?
 - 10 nm
 - 10 mm
 - 1 nm
 - 1 mm
- Which kind of electromagnetic radiation contains the greatest energy per photon?
 - microwaves
 - gamma rays
 - infrared
 - visible light
- How much energy (in J) is contained in 1.00 mole of 552-nm photons?
 - 3.60×10^{-19} J
 - 2.17×10^5 J
 - 3.60×10^{-28} J
 - 5.98×10^{-43} J
- Light from three different lasers (A, B, and C), each with a different wavelength, is shined onto the same metal surface. Laser A produces no photoelectrons. Lasers B and C both produce photoelectrons, but the photoelectrons produced by laser B have a greater velocity than those produced by laser C. Arrange the lasers in order of increasing wavelength.
 - $A < B < C$
 - $B < C < A$
 - $C < B < A$
 - $A < C < B$
- Calculate the wavelength of an electron traveling at 1.85×10^7 m/s.
 - 2.54×10^{13} m
 - 3.93×10^{-14} m
 - 2.54×10^{10} m
 - 3.93×10^{-11} m
- Which set of three quantum numbers does not specify an orbital in the hydrogen atom?
 - $n = 2; l = 1; m_l = -1$
 - $n = 3; l = 3; m_l = -2$
 - $n = 2; l = 0; m_l = 0$
 - $n = 3; l = 2; m_l = 2$
- Calculate the wavelength of light emitted when an electron in the hydrogen atom makes a transition from an orbital with $n = 5$ to an orbital with $n = 3$.
 - 1.28×10^{-6} m
 - 6.04×10^{-7} m
 - 2.28×10^{-6} m
 - 1.55×10^{-19} m
- Which electron transition produces light of the highest frequency in the hydrogen atom?
 - $5p \longrightarrow 1s$
 - $4p \longrightarrow 1s$
 - $3p \longrightarrow 1s$
 - $2p \longrightarrow 1s$
- How much time (in seconds) does it take light to travel 1.00 billion km?
 - 3.00×10^{17} s
 - 3.33 s
 - 3.33×10^3 s
 - 3.00×10^{20} s
- Which figure represents a d orbital?
 - 
 - 
 - 
 - none of the above

Answers: 1. c; 2. b; 3. b; 4. b; 5. d; 6. b; 7. a; 8. a; 9. c; 10. b

CHAPTER SUMMARY

2

MasteringChemistry™ provides end-of-chapter exercises, feedback-enriched tutorial problems, animations, and interactive activities to encourage problem solving practice and deeper understanding of key concepts and topics.

REVIEW

KEY LEARNING OUTCOMES

CHAPTER OBJECTIVES	ASSESSMENT
Relate the Wavelength and Frequency of Light (2.2)	• Example 2.1 For Practice 2.1 Exercises 39, 40
Calculate the Energy of a Photon (2.2)	• Example 2.2 For Practice 2.2 For More Practice 2.2 Exercises 41–46
Relate Wavelength, Energy, and Frequency to the Electromagnetic Spectrum (2.2)	• Example 2.3 For Practice 2.3 Exercises 37, 38
Use the de Broglie Relation to Calculate Wavelength (2.4)	• Example 2.4 For Practice 2.4 Exercises 49–54
Relate Quantum Numbers to One Another and to Their Corresponding Orbitals (2.5)	• Examples 2.5, 2.6 For Practice 2.5, 2.6 Exercises 59–62
Relate the Wavelength of Light to Transitions in the Hydrogen Atom (2.5)	• Example 2.7 For Practice 2.7 For More Practice 2.7 Exercises 69–72

KEY TERMS

Section 2.1

quantum-mechanical model (76)

Section 2.2

electromagnetic radiation (76)

amplitude (77)

wavelength (λ) (77)

frequency (ν) (77)

electromagnetic spectrum (78)

gamma ray (78)

X-ray (79)

ultraviolet (UV) radiation (79)

visible light (79)

infrared (IR) radiation (79)

microwave (79)

radio wave (79)

interference (80)

constructive interference (80)

destructive interference (80)

diffraction (80)

photoelectric effect (80)

binding energy (80)

photon (quantum) (82)

Section 2.3

emission spectrum (85)

absorption spectrum (88)

Section 2.4

de Broglie relation (89)

complementary properties (91)

Heisenberg's uncertainty principle (91)

deterministic (92)

indeterminacy (93)

Section 2.5

orbital (93)

wave function (ψ) (93)

quantum number (94)

principal quantum number (n) (94)

angular momentum quantum number (l) (94)

magnetic quantum number (m_l) (94)

spin quantum number (m_s) (94)

electron spin (95)

principal level (shell) (95)

sublevel (subshell) (95)

Section 2.6

probability density (99)

radial distribution function (99)

node (100)

phase (103)

KEY CONCEPTS

The Realm of Quantum Mechanics (2.1)

- The theory of quantum mechanics explains the behavior of absolutely small particles, such as electrons, in the atomic and subatomic realms.
- These particles behave differently than the sorts of particles we see in the macroscopic world.

The Nature of Light (2.2)

- Light is a type of electromagnetic radiation—a form of energy embodied in oscillating electric and magnetic fields that travels through space at 3.00×10^8 m/s.
- The wave nature of light is characterized by its wavelength—the distance between wave crests—and its ability to experience interference (constructive or destructive) and diffraction.
- The electromagnetic spectrum includes all wavelengths of electromagnetic radiation from gamma rays (high energy per photon, short

wavelength) to radio waves (low energy per photon, long wavelength). Visible light is a tiny sliver in the middle of the electromagnetic spectrum.

- The particle nature of light is characterized by the specific quantity of energy carried in each photon.

Atomic Spectroscopy (2.3)

- Atomic spectroscopy is the study of the light absorbed and emitted by atoms when an electron makes a transition from one energy level to another.
- The wavelengths absorbed or emitted depend on the energy differences between the levels involved in the transition; large energy differences result in short wavelengths, and small energy differences result in long wavelengths.

The Wave Nature of Matter (2.4)

- Electrons have a wave nature with an associated wavelength, as quantified by the de Broglie relation.
- The wave nature and particle nature of matter are complementary—the more we know of one, the less we know of the other.
- The wave–particle duality of electrons is quantified in Heisenberg’s uncertainty principle, which states that there is a limit to how well we can know both the position of an electron (associated with the electron’s particle nature) and the velocity times the mass of an electron (associated with the electron’s wave nature)—the more accurately one is measured, the greater the uncertainty in measurement of the other.
- The inability to simultaneously know both the position and the velocity of an electron results in indeterminacy, the inability to predict a trajectory for an electron. Consequently, electron behavior is described differently than the behavior of everyday-sized particles.
- The trajectory we normally associate with macroscopic objects is replaced, for electrons, with statistical descriptions that show, not the electron’s path, but the region where it is most likely to be found.

The Quantum-Mechanical Model of the Atom (2.5, 2.6)

- The most common way to describe electrons in atoms according to quantum mechanics is to solve the Schrödinger equation for the energy states of the electrons within the atom. When the electron is in these states, its energy is well defined but its position is not. The position of an electron is described by a probability distribution map called an orbital.
- The solutions to the Schrödinger equation (including the energies and orbitals) are characterized by quantum numbers: n , l , and m_l .
- The principal quantum number (n) determines the energy of the electron and the size of the orbital; the angular momentum quantum number (l) determines the shape of the orbital; the magnetic quantum number (m_l) determines the orientation of the orbital. A fourth quantum number, the spin quantum number (m_s), specifies the orientation of the spin of the electron.

KEY EQUATIONS AND RELATIONSHIPS

Relationship between Frequency (ν), Wavelength (λ), and the Speed of Light (c) (2.2)

$$\nu = \frac{c}{\lambda}$$

Relationship between Energy (E), Frequency (ν), Wavelength (λ), and Planck’s Constant (h) (2.2)

$$E = h\nu$$

$$E = \frac{hc}{\lambda}$$

de Broglie Relation: Relationship between Wavelength (λ), Mass (m), and Velocity (v) of a Particle (2.4)

$$\lambda = \frac{h}{mv}$$

Heisenberg’s Uncertainty Principle: Relationship between a Particle’s Uncertainty in Position (Δx) and Uncertainty in Velocity (Δv) (2.4)

$$\Delta x \times m\Delta v \geq \frac{h}{4\pi}$$

Energy of an Electron in an Orbital with Quantum Number n in a Hydrogen Atom (2.5)

$$E_n = -2.18 \times 10^{-18} \text{ J} \left(\frac{1}{n^2} \right) (n = 1, 2, 3, \dots)$$

Change in Energy That Occurs in an Atom When It Undergoes a Transition between Levels n_{initial} and n_{final} (2.5)

$$\Delta E = -2.18 \times 10^{-18} \text{ J} \left(\frac{1}{n_f^2} - \frac{1}{n_i^2} \right)$$

EXERCISES

REVIEW QUESTIONS

1. Why is the quantum-mechanical model of the atom important for understanding chemistry?
2. What is light? How fast does it travel in a vacuum?
3. Define the wavelength and amplitude of a wave.
4. Define the frequency of electromagnetic radiation. How is frequency related to wavelength?
5. What determines the color of light? Describe the difference between red light and blue light.
6. What determines the color of a colored object? Explain why grass appears green.
7. Give an approximate range of wavelengths for each type of electromagnetic radiation and summarize the characteristics and/or the uses of each.
 - a. gamma rays
 - b. X-rays
 - c. ultraviolet radiation
 - d. visible light
 - e. infrared radiation
 - f. microwave radiation
 - g. radio waves

8. Explain the wave behavior known as interference. Explain the difference between constructive and destructive interference.
9. Explain the wave behavior known as diffraction. Draw the diffraction pattern that occurs when light travels through two slits comparable in size and separation to the light's wavelength.
10. Describe the photoelectric effect. How did experimental observations of this phenomenon differ from the predictions of classical electromagnetic theory?
11. How did the photoelectric effect lead Einstein to propose that light is quantized?
12. What is a photon? How is the energy of a photon related to its wavelength? Its frequency?
13. What is an emission spectrum? How does an emission spectrum of a gas in a discharge tube differ from a white light spectrum?
14. Describe the Bohr model for the atom. How did the Bohr model account for the emission spectra of atoms?
15. Explain electron diffraction.
16. What is the de Broglie wavelength of an electron? What determines the value of the de Broglie wavelength for an electron?
17. What are complementary properties? How does electron diffraction demonstrate the complementarity of the wave nature and particle nature of the electron?
18. Explain Heisenberg's uncertainty principle. What paradox is at least partially solved by the uncertainty principle?
19. What is a trajectory? What kind of information do you need to predict the trajectory of a particle?
20. Why does the uncertainty principle make it impossible to predict a trajectory for the electron?
21. Newton's laws of motion are *deterministic*. Explain this statement.
22. An electron behaves in ways that are at least partially indeterminate. Explain this statement.
23. What is a probability distribution map?
24. For each solution to the Schrödinger equation, which quantity can be precisely specified: the electron's energy or its position? Explain.
25. What is a quantum-mechanical orbital?
26. What is the Schrödinger equation? What is a wave function? How is a wave function related to an orbital?
27. What are the possible values of the principal quantum number n ? What does the principal quantum number determine?
28. What are the possible values of the angular momentum quantum number l ? What does the angular momentum quantum number determine?
29. What are the possible values of the magnetic quantum number m_l ? What does the magnetic quantum number determine?
30. List all the orbitals in each principal level. Specify the three quantum numbers for each orbital.
 - a. $n = 1$
 - b. $n = 2$
 - c. $n = 3$
 - d. $n = 4$
31. Explain the difference between a plot showing the probability density for an orbital and one showing the radial distribution function.
32. Sketch the general shapes of the s , p , and d orbitals.
33. List the four different sublevels. Given that only a maximum of two electrons can occupy an orbital, determine the maximum number of electrons that can exist in each sublevel.
34. Why are atoms usually portrayed as spheres when most orbitals are not spherically shaped?

PROBLEMS BY TOPIC

Note: Answers to all odd-numbered Problems, numbered in blue, can be found in Appendix III. Exercises in the Problems by Topic section are paired, with each odd-numbered problem followed by a similar even-numbered problem. Exercises in the Cumulative Problems section are also paired but more loosely. Because of their nature, Challenge Problems and Conceptual Problems are unpaired.

Electromagnetic Radiation

35. The distance from the sun to Earth is 1.496×10^8 km. How long does it take light to travel from the sun to Earth?
36. The nearest star to our sun is Proxima Centauri, at a distance of 4.3 light-years from the sun. A light-year is the distance that light travels in one year (365 days). How far away, in km, is Proxima Centauri from the sun?
37. List these types of electromagnetic radiation in order of (i) increasing wavelength and (ii) increasing energy per photon:
 - a. radio waves
 - b. microwaves
 - c. infrared radiation
 - d. ultraviolet radiation
38. List these types of electromagnetic radiation in order of (i) increasing frequency and (ii) decreasing energy per photon:
 - a. gamma rays
 - b. radio waves
 - c. microwaves
 - d. visible light
39. Calculate the frequency of each wavelength of electromagnetic radiation:
 - a. 632.8 nm (wavelength of red light from helium–neon laser)
 - b. 503 nm (wavelength of maximum solar radiation)
 - c. 0.052 nm (wavelength contained in medical X-rays)
40. Calculate the wavelength of each frequency of electromagnetic radiation:
 - a. 100.2 MHz (typical frequency for FM radio broadcasting)
 - b. 1070 kHz (typical frequency for AM radio broadcasting) (assume four significant figures)
 - c. 835.6 MHz (common frequency used for cell phone communication)
41. Calculate the energy of a photon of electromagnetic radiation at each of the wavelengths indicated in Problem 39.
42. Calculate the energy of a photon of electromagnetic radiation at each of the frequencies indicated in Problem 40.
43. A laser pulse with wavelength 532 nm contains 3.85 mJ of energy. How many photons are in the laser pulse?

44. A heat lamp produces 32.8 watts of power at a wavelength of $6.5\ \mu\text{m}$. How many photons are emitted per second? (1 watt = 1 J/s)
45. Determine the energy of 1 mol of photons for each kind of light. (Assume three significant figures.)
- infrared radiation (1500 nm)
 - visible light (500 nm)
 - ultraviolet radiation (150 nm)
46. How much energy is contained in 1 mol of each?
- X-ray photons with a wavelength of 0.135 nm
 - γ -ray photons with a wavelength of $2.15 \times 10^{-5}\ \text{nm}$

The Wave Nature of Matter and the Uncertainty Principle

47. Sketch the interference pattern that results from the diffraction of electrons passing through two closely spaced slits.
48. What happens to the interference pattern described in Problem 47 if the rate of electrons going through the slits is decreased to one electron per hour? What happens to the pattern if we try to determine which slit the electron goes through by using a laser placed directly behind the slits?
49. The resolution limit of a microscope is roughly equal to the wavelength of light used in producing the image. Electron microscopes use an electron beam (in place of photons) to produce much higher resolution images, about 0.20 nm in modern instruments. Assuming that the resolution of an electron microscope is equal to the de Broglie wavelength of the electrons used, to what speed must the electrons be accelerated to obtain a resolution of 0.20 nm?
50. The smallest atoms can themselves exhibit quantum-mechanical behavior. Calculate the de Broglie wavelength (in pm) of a hydrogen atom traveling 475 m/s.
51. What is the de Broglie wavelength of an electron traveling at $1.35 \times 10^5\ \text{m/s}$?
52. A proton in a linear accelerator has a de Broglie wavelength of 122 pm. What is the speed of the proton?
53. Calculate the de Broglie wavelength of a 143-g baseball traveling at 95 mph. Why is the wave nature of matter not important for a baseball?
54. A 0.22-caliber handgun fires a 27-g bullet at a velocity of 765 m/s. Calculate the de Broglie wavelength of the bullet. Is the wave nature of matter significant for bullets?
55. An electron has an uncertainty in its position of 552 pm. What is the uncertainty in its velocity? (Hint: $\Delta x = 552 \times 10^{-12}\ \text{m}$; use Equation 2.5 to calculate Δv .)
56. An electron traveling at $1.35 \times 10^5\ \text{m/s}$ has an uncertainty in its velocity of $1.88 \times 10^5\ \text{m/s}$. What is the uncertainty in its position?
61. Which set of quantum numbers *cannot* occur together to specify an orbital?
- $n = 2, l = 1, m_l = -1$
 - $n = 3, l = 2, m_l = 0$
 - $n = 3, l = 3, m_l = 2$
 - $n = 4, l = 3, m_l = 0$
62. Which combinations of n and l represent real orbitals, and which do not exist?
- 1s
 - 2p
 - 4s
 - 2d
63. Sketch the 1s and 2p orbitals. How do the 2s and 3p orbitals differ from the 1s and 2p orbitals?
64. Sketch the 3d orbitals. How do the 4d orbitals differ from the 3d orbitals?

Atomic Spectroscopy

65. An electron in a hydrogen atom is excited with electrical energy to an excited state with $n = 2$. The atom then emits a photon. What is the value of n for the electron following the emission?
66. Determine whether each transition in the hydrogen atom corresponds to absorption or emission of energy.
- $n = 3 \longrightarrow n = 1$
 - $n = 2 \longrightarrow n = 4$
 - $n = 4 \longrightarrow n = 3$
67. According to the quantum-mechanical model for the hydrogen atom, which electron transition produces light with the longer wavelength: $2p \longrightarrow 1s$ or $3p \longrightarrow 1s$?
68. According to the quantum-mechanical model for the hydrogen atom, which electron transition produces light with the longer wavelength: $4p \longrightarrow 2s$ or $4p \longrightarrow 3p$?
69. Calculate the wavelength of the light emitted when an electron in a hydrogen atom makes each transition and indicate the region of the electromagnetic spectrum (infrared, visible, ultraviolet, etc.) where the light is found.
- $n = 2 \longrightarrow n = 1$
 - $n = 3 \longrightarrow n = 1$
 - $n = 4 \longrightarrow n = 2$
 - $n = 5 \longrightarrow n = 2$
70. Calculate the frequency of the light emitted when an electron in a hydrogen atom makes each transition:
- $n = 4 \longrightarrow n = 3$
 - $n = 5 \longrightarrow n = 1$
 - $n = 5 \longrightarrow n = 4$
 - $n = 6 \longrightarrow n = 5$
71. An electron in the $n = 7$ level of the hydrogen atom relaxes to a lower energy level, emitting light of 397 nm. What is the value of n for the level to which the electron relaxed?
72. An electron in a hydrogen atom relaxes to the $n = 4$ level, emitting light of 114 THz. What is the value of n for the level in which the electron originated?

Orbitals and Quantum Numbers

57. Which electron is, on average, closer to the nucleus: an electron in a 2s orbital or an electron in a 3s orbital?
58. Which electron is, on average, further from the nucleus: an electron in a 3p orbital or an electron in a 4p orbital?
59. What are the possible values of l for each given value of n ?
- 1
 - 2
 - 3
 - 4
60. What are the possible values of m_l for each given value of l ?
- 0
 - 1
 - 2
 - 3

CUMULATIVE PROBLEMS

73. Ultraviolet radiation and radiation of shorter wavelengths can damage biological molecules because they carry enough energy to break bonds within the molecules. A typical carbon–carbon bond requires 348 kJ/mol to break. What is the longest wavelength of radiation with enough energy to break carbon–carbon bonds?
74. The human eye contains a molecule called 11-*cis*-retinal that changes shape when struck with light of sufficient energy. The change in shape triggers a series of events that results in an electrical signal being sent to the brain. The minimum energy required to change the conformation of 11-*cis*-retinal within the eye is about 164 kJ/mol. Calculate the longest wavelength visible to the human eye.
75. An argon ion laser puts out 5.0 W of continuous power at a wavelength of 532 nm. The diameter of the laser beam is 5.5 mm. If the laser is pointed toward a pinhole with a diameter of 1.2 mm, how many photons will travel through the pinhole per second? Assume that the light intensity is equally distributed throughout the entire cross-sectional area of the beam. ($1 \text{ W} = 1 \text{ J/s}$) *Hint:* Use the formula for the area of a circle ($A = \pi r^2$) to find the cross-sectional area of the beam and of the pinhole and determine what fraction of the power gets through the pinhole.
76. A green leaf has a surface area of 2.50 cm^2 . If solar radiation is 1000 W/m^2 , how many photons strike the leaf every second? Assume three significant figures and an average wavelength of 504 nm for solar radiation.
77. In a technique used for surface analysis called auger electron spectroscopy (AES), electrons are accelerated toward a metal surface. These electrons cause the emissions of secondary electrons—called auger electrons—from the metal surface. The kinetic energy of the auger electrons depends on the composition of the surface. The presence of oxygen atoms on the surface results in auger electrons with a kinetic energy of approximately 506 eV. What is the de Broglie wavelength of one of these electrons?

$$\left[\text{KE} = \frac{1}{2}mv^2; 1 \text{ electron volt (eV)} = 1.602 \times 10^{-19} \text{ J} \right]$$

78. An X-ray photon of wavelength 0.989 nm strikes a surface. The emitted electron has a kinetic energy of 969 eV. What is the binding energy of the electron in kJ/mol? *Hint:* The kinetic energy of the electron is equal to the energy of the photon ($h\nu$) minus the binding energy of the electron (ϕ): $\text{KE} = h\nu - \phi$.

$$[1 \text{ electron volt (eV)} = 1.602 \times 10^{-19} \text{ J}]$$

79. Ionization involves completely removing an electron from an atom. How much energy is required to ionize a hydrogen atom in its ground (or lowest energy) state? What wavelength of light contains enough energy in a single photon to ionize a hydrogen atom?
80. The energy required to ionize sodium is 496 kJ/mol. What minimum frequency of light is required to ionize sodium?
81. Suppose that in an alternate universe, the possible values of l are the integer values from 0 to n (instead of 0 to $n - 1$). Assuming no other differences between this imaginary universe and ours, how many orbitals would exist in each level?
- $n = 1$
 - $n = 2$
 - $n = 3$
82. Suppose that, in an alternate universe, the possible values of m_l are the integer values including 0 ranging from $-l - 1$ to $l + 1$ (instead of simply $-l$ to $+l$). How many orbitals exist in each sublevel?
- s sublevel
 - p sublevel
 - d sublevel
83. An atomic emission spectrum of hydrogen shows three wavelengths: 1875 nm, 1282 nm, and 1093 nm. Assign these wavelengths to transitions in the hydrogen atom.
84. An atomic emission spectrum of hydrogen shows three wavelengths: 121.5 nm, 102.6 nm, and 97.23 nm. Assign these wavelengths to transitions in the hydrogen atom.
85. The binding energy of electrons in a metal is 193 kJ/mol. Find the threshold frequency of the metal.
86. In order for a thermonuclear fusion reaction of two deuterons (${}^2_1\text{H}^+$) to take place, the deuterons must collide with each deuteron traveling at $1 \times 10^6 \text{ m/s}$. Find the wavelength of such a deuteron.
87. The speed of sound in air is 344 m/s at room temperature. The lowest frequency of a large organ pipe is 30 s^{-1} and the highest frequency of a piccolo is $1.5 \times 10^4 \text{ s}^{-1}$. Determine the difference in wavelength between these two sounds.
88. The distance from Earth to the sun is $1.5 \times 10^8 \text{ km}$. Find the number of crests in a light wave of frequency $1.0 \times 10^{14} \text{ s}^{-1}$ traveling from the sun to the Earth.
89. The iodine molecule can be photodissociated (broken apart with light) into iodine atoms in the gas phase with light of wavelengths shorter than about 792 nm. A glass tube contains 1.80×10^{17} iodine molecules. What minimum amount of light energy must be absorbed by the iodine in the tube to dissociate 15.0% of the molecules?
90. An ampule of naphthalene in hexane contains $5.00 \times 10^{-4} \text{ mol}$ naphthalene. The naphthalene is excited with a flash of light and then emits 15.5 J of energy at an average wavelength of 349 nm. What percentage of the naphthalene molecules emitted a photon?
91. A laser produces 20.0 mW of red light. In 1.00 hr, the laser emits 2.29×10^{20} photons. What is the wavelength of the laser?
92. A particular laser consumes 150.0 watts of electrical power and produces a stream of 1.33×10^{19} 1064-nm photons per second. What is the percent efficiency of the laser in converting electrical power to light?

CHALLENGE PROBLEMS

93. An electron confined to a one-dimensional box has energy levels given by the equation

$$E_n = n^2 h^2 / 8 m L^2$$

where n is a quantum number with possible values of 1, 2, 3, ..., m is the mass of the particle, and L is the length of the box.

- Calculate the energies of the $n = 1$, $n = 2$, and $n = 3$ levels for an electron in a box with a length of 155 pm.
 - Calculate the wavelength of light required to make a transition from $n = 1 \longrightarrow n = 2$ and from $n = 2 \longrightarrow n = 3$. In what region of the electromagnetic spectrum do these wavelengths lie?
94. The energy of a vibrating molecule is quantized much like the energy of an electron in the hydrogen atom. The energy levels of a vibrating molecule are given by the equation

$$E_n = \left(n + \frac{1}{2} \right) h \nu$$

where n is a quantum number with possible values of 1, 2, ..., and ν is the frequency of vibration. The vibration frequency of HCl is approximately $8.85 \times 10^{13} \text{ s}^{-1}$. What minimum energy is required to excite a vibration in HCl? What wavelength of light is required to excite this vibration?

95. The wave functions for the 1s and 2s orbitals are as follows:

$$1s \psi = (1/\pi)^{1/2} (1/a_0^{3/2}) \exp(-r/a_0)$$

$$2s \psi = (1/32\pi)^{1/2} (1/a_0^{3/2}) (2-r/a_0) \exp(-r/a_0)$$

where a_0 is a constant ($a_0 = 53 \text{ pm}$) and r is the distance from the nucleus. Use a spreadsheet to make a plot of each of these wave functions for values of r ranging from 0 pm to 200 pm. Describe the differences in the plots and identify the node in the 2s wave function.

96. Before quantum mechanics was developed, Johannes Rydberg developed an equation that predicted the wavelengths (λ) in the atomic spectrum of hydrogen:

$$1/\lambda = R(1/m^2 - 1/n^2)$$

In this equation R is a constant and m and n are integers. Use the quantum-mechanical model for the hydrogen atom to derive the Rydberg equation.

- Find the velocity of an electron emitted by a metal whose threshold frequency is $2.25 \times 10^{14} \text{ s}^{-1}$ when it is exposed to visible light of wavelength $5.00 \times 10^{-7} \text{ m}$.
- Water is exposed to infrared radiation of wavelength $2.8 \times 10^{-4} \text{ cm}$. Assume that all the radiation is absorbed and converted to heat. How many photons are required for the sample to absorb 16.72 J of heat?
- The 2005 Nobel Prize in Physics was given, in part, to scientists who had made ultrashort pulses of light. These pulses are important in making measurements involving very short time periods. One challenge in making such pulses is the uncertainty principle, which can be stated with respect to energy and time as $\Delta E \cdot \Delta t \geq h/4\pi$. What is the energy uncertainty (ΔE) associated with a short pulse of laser light that lasts for only 5.0 femtoseconds (fs)? Suppose the low-energy end of the pulse had a wavelength of 722 nm. What is the wavelength of the high-energy end of the pulse that is limited only by the uncertainty principle?
- A metal with a threshold frequency of $6.71 \times 10^{14} \text{ s}^{-1}$ emits an electron with a velocity of $6.95 \times 10^5 \text{ m/s}$ when radiation of $1.01 \times 10^{15} \text{ s}^{-1}$ strikes the metal. Calculate the mass of the electron.
- Find the longest wavelength of a wave that can travel around in a circular orbit of radius 1.8 m.
- The amount of heat to melt ice is 0.333 kJ/g. Find the number of photons of wavelength $= 6.42 \times 10^{-6} \text{ m}$ that must be absorbed to melt $5.55 \times 10^{-2} \text{ mol}$ of ice.

CONCEPTUAL PROBLEMS

- Explain the difference between the Bohr model for the hydrogen atom and the quantum-mechanical model. Is the Bohr model consistent with Heisenberg's uncertainty principle?
- The light emitted from one of the following electronic transitions ($n = 4 \longrightarrow n = 3$ or $n = 3 \longrightarrow n = 2$) in the hydrogen atom causes the photoelectric effect in a particular metal while light from the other transition does not. Which transition causes the photoelectric effect and why?
- Determine whether an interference pattern is observed on the other side of the slits in each experiment.
 - An electron beam is aimed at two closely spaced slits. The beam is attenuated (made dimmer) to produce only 1 electron per minute.
 - An electron beam is aimed at two closely spaced slits. A light beam is placed at each slit to determine when an electron goes through the slit.
 - A high-intensity light beam is aimed at two closely spaced slits.
 - A gun is fired at a solid wall containing two closely spaced slits. (Will the bullets that pass through the slits form an interference pattern on the other side of the solid wall?)
- Which transition in the hydrogen atom results in emitted light with the longest wavelength?
 - $n = 4 \longrightarrow n = 3$
 - $n = 2 \longrightarrow n = 1$
 - $n = 3 \longrightarrow n = 2$

QUESTIONS FOR GROUP WORK

Active Classroom Learning

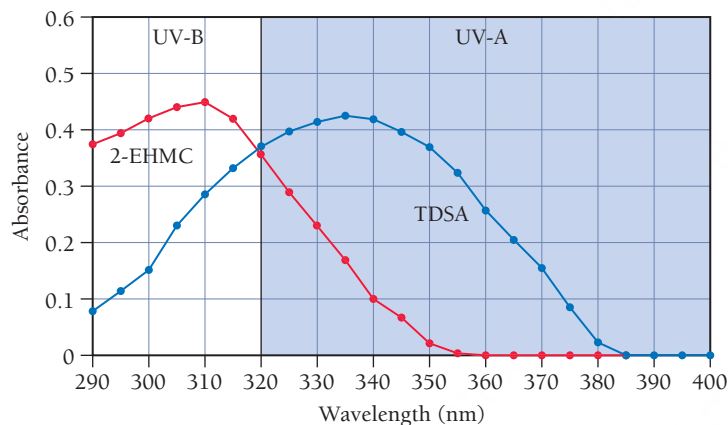
Discuss these questions with the group and record your consensus answer.

107. Discuss the nature of light with your group. Transcribe one complete sentence about the physical nature of light for each member of your group.
108. How are electrons like baseballs? How are they unlike baseballs?
109. What are all the possible values of m_l if $l = 0$ (an s orbital)? If $l = 1$ (a p orbital)? If $l = 2$ (a d orbital)? How many possible values of m_l would there be if $l = 20$? Write an equation to determine the number of possible values of m_l from the value of l .

110. Have each group member choose a set of quantum numbers for an electron in a hydrogen atom. Calculate the wavelength of light produced if an electron moves from your state to each of the states of the other group members. Make a table comparing all possible combinations, and list all wavelengths in order of increasing energy.
111. How many nodes are there in the $1s$, $2p$, and $3d$ orbitals? How many nodes are in a $4f$ orbital?

DATA INTERPRETATION AND ANALYSIS

112. Sunscreen contains compounds that absorb ultraviolet light. When sunscreen is applied to skin, it prevents ultraviolet light from reaching the skin. The graph that follows shows the absorbance of light as a function of wavelength for two different compounds (2-EHMC and TDSA) common in sunscreen. Absorbance is a measure of the amount of light absorbed by the compound—the higher the absorbance, the more light is absorbed. Study the graph and answer the questions.



<http://mycpss.com/critical-wavelength-broad-spectrum-uv-protection/>

- a. Calculate the energy of a photon at the maximum absorption of TDSA.
- b. Calculate the energy of a photon at the maximum absorption of 2-EHMC.
- c. Which compound absorbs more energy at its maximum absorption?
- d. Why do you think sunscreens commonly contain both of these compounds and not just one of them?
- e. Assuming that sunlight produces $3.066 \times 10^{22} \frac{\text{UV photons}}{\text{m}^2 \cdot \text{s}}$, and that the skin absorbs one-half of these photons (and reflects the other half), calculate the total UV energy absorbed over 0.42 m^2 of skin that is exposed to sunlight for one hour. Assume that the average wavelength of the UV photons is 330 nm .

ANSWERS TO CONCEPTUAL CONNECTIONS

- Cc 2.1 (a) infrared < visible < X-ray
(b) X-ray < visible < infrared
- Cc 2.2 Observation A corresponds to 632 nm ; observation B corresponds to 325 nm ; and observation C corresponds to 455 nm . The shortest wavelength of light (highest energy per photon) corresponds to the photoelectrons with the greatest kinetic energy. The longest wavelength of light (lowest energy per photon) corresponds to the instance where no photoelectrons were observed.
- Cc 2.3 Because of the baseball's large mass, its de Broglie wavelength is minuscule. (For a 150-g baseball, λ is on the order of 10^{-34} m .) This minuscule wavelength is insignificant compared to the size of the baseball itself, and therefore its effects are not observable.

- Cc 2.4 (c) Since l can have a maximum value of $n-1$, and since $n = 3$, then l can have a maximum value of 2.
- Cc 2.5 (d) Since m_l can have the integer values (including 0) between $-l$ and $+l$, and since $l = 2$, the possible values of m_l are $-2, -1, 0, +1$, and $+2$.
- Cc 2.6 (c) The energy difference between $n = 3$ and $n = 2$ is greatest because the energy differences get closer together with increasing n . The greater energy difference results in an emitted photon of greater energy and therefore shorter wavelength.

- 3.1** Aluminum: Low-Density Atoms Result in Low-Density Metal 113
- 3.2** The Periodic Law and the Periodic Table 114
- 3.3** Electron Configurations: How Electrons Occupy Orbitals 117
- 3.4** Electron Configurations, Valence Electrons, and the Periodic Table 124
- 3.5** Electron Configurations and Elemental Properties 128

- 3.6** Periodic Trends in Atomic Size and Effective Nuclear Charge 131
- 3.7** Ions: Electron Configurations, Magnetic Properties, Radii, and Ionization Energy 136
- 3.8** Electron Affinities and Metallic Character 144
- 3.9** Periodic Trends Summary 147
- Key Learning Outcomes** 149



The majority of the material that composes most aircraft is aluminum.

CHAPTER

3

Periodic Properties of the Elements

GREAT ADVANCES IN SCIENCE occur not only when a scientist sees something new, but also when a scientist sees something everyone else has seen in a new way. That is what happened in 1869 when Dmitri Mendeleev, a Russian chemistry professor, saw a pattern in the properties of elements. Mendeleev's insight led to the development of the periodic table. Recall from Chapter 1 that theories explain the underlying reasons for observations. If we think of Mendeleev's periodic table as a compact way to summarize a large number of observations, then quantum mechanics is the theory that explains the underlying reasons. Quantum mechanics explains how electrons are arranged in an element's atoms, which in turn determines the element's properties. Because the periodic table is organized according to those properties, quantum mechanics elegantly accounts for Mendeleev's periodic table. In this chapter, we see a continuation of this book's theme—the properties of matter (in this case, the elements in the periodic table) are explained by the properties of the particles that compose them (in this case, atoms and their electrons).

“It is the function of science to discover the existence of a general reign of order in nature and to find the causes governing this order.”

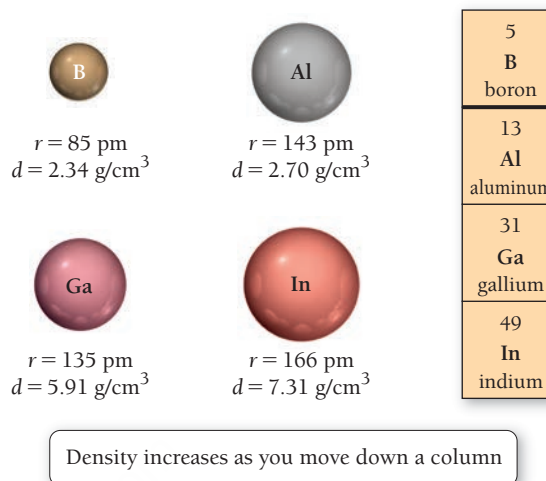
—Dmitri Mendeleev (1834–1907)

3.1 Aluminum: Low-Density Atoms Result in Low-Density Metal

Look out the window of almost any airplane and you will see the large sheets of aluminum that compose the aircraft's wing. In fact, the majority of the plane is most likely made out of aluminum. Aluminum has several properties that make it suitable for airplane construction, but among the most important is its low density. Aluminum has a density of only 2.70 g/cm^3 . For comparison, iron's density is 7.86 g/cm^3 , and platinum's density is 21.4 g/cm^3 . Why is the density of aluminum metal so low?

The density of aluminum metal is low because the density of an aluminum atom is low. Few metal atoms have a lower mass-to-volume ratio than aluminum, and those that do can't be used in airplanes for other reasons (such as their high chemical reactivity). Although the arrangements of atoms in a solid must also be considered when evaluating the density of the solid, the mass-to-volume ratio of the composite atoms

is a very important factor. For this reason, the densities of the elements generally follow a fairly well-defined trend: *The density of elements tends to increase as we move down a column in the periodic table.* For example, consider the densities of several elements in the column that includes aluminum in the periodic table:



As we move down the column in the periodic table, the density of the elements increases even though the radius generally increases as well (with the exception of Ga whose radius decreases a bit). Why? *Because the mass of each successive atom increases even more than its volume does.* As we move down a column in the periodic table, the additional protons and neutrons add more mass to the atoms. This increase in mass is greater than the increase in volume, resulting in a higher density.

The densities of elements and the radii of their atoms are examples of *periodic properties*. A **periodic property** is one that is generally predictable based on an element's position within the periodic table. In this chapter, we examine several periodic properties of elements, including atomic radius, ionization energy, and electron affinity. As we do, we will see that these properties—as well as the overall arrangement of the periodic table—are explained by quantum-mechanical theory, which we first examined in Chapter 2. *Quantum-mechanical theory explains the electronic structure of atoms—this in turn determines the properties of those atoms.*

Notice again that *structure determines properties*. The arrangement of elements in the periodic table—originally based on similarities in the properties of the elements—reflects how electrons fill quantum-mechanical orbitals. Understanding the structure of atoms as explained by quantum mechanics allows us to predict the properties of elements from their position on the periodic table. If we need a metal with a high density, for example, we look toward the bottom of the periodic table. Platinum (as we saw previously) has a density of 21.4 g/cm^3 . It is among the densest metals and is found near the bottom of the periodic table. If we need a metal with a low density, we look toward the top of the periodic table. Aluminum is among the least dense metals and is found near the top of the periodic table.

3.2 The Periodic Law and the Periodic Table

Prior to the 1700s, the number of known elements was relatively small, consisting mostly of the metals used for coinage, jewelry, and weapons. From the early 1700s to the mid-1800s, however, chemists discovered over 50 new elements. The first attempt to organize these elements according to similarities in their properties was made by the German chemist Johann Döbereiner (1780–1849), who grouped elements into *triads*: A triad consisted of three elements with similar properties. For example, Döbereiner formed a triad out of barium, calcium, and strontium, three fairly reactive metals. About 50 years later, English chemist John Newlands (1837–1898) organized elements into *octaves*, in analogy to musical notes. When arranged this way, the properties of every eighth element were similar, much as every eighth note in the musical scale is similar. Newlands endured some ridicule for drawing an analogy between chemistry and music, including the derisive comments of one colleague who asked Newlands if he had ever tried ordering the elements according to the first letters of their names.

The Periodic Law

1 H	2 He	3 Li	4 Be	5 B	6 C	7 N	8 O	9 F	10 Ne	11 Na	12 Mg	13 Al	14 Si	15 P	16 S	17 Cl	18 Ar	19 K	20 Ca
--------	---------	---------	---------	--------	--------	--------	--------	--------	----------	----------	----------	----------	----------	---------	---------	----------	----------	---------	----------

Elements with similar properties recur in a regular pattern.

▲ FIGURE 3.1 Recurring Properties These elements are listed in order of increasing atomic number. Elements with similar properties are represented with the same color. Notice that the colors form a repeating pattern, much like musical notes form a repeating pattern on a piano keyboard.

The modern periodic table is credited primarily to the Russian chemist Dmitri Mendeleev (1834–1907), even though a similar organization had been suggested by the German chemist Julius Lothar Meyer (1830–1895). In 1869, Mendeleev noticed that certain groups of elements had similar properties. He also found that when he listed elements in order of increasing mass, these similar properties recurred in a periodic pattern (**Figure 3.1 ▲**). Mendeleev summarized these observations in the **periodic law**:

When the elements are arranged in order of increasing mass, certain sets of properties recur periodically.

Mendeleev organized the known elements in a table consisting of a series of rows in which mass increases from left to right. He arranged the rows so that elements with similar properties fall in the same vertical columns (**Figure 3.2 ►**).

Mendeleev's arrangement was a huge success, allowing him to predict the existence and properties of yet undiscovered elements such as eka-aluminum, later discovered and named gallium and eka-silicon, later discovered and named germanium. (*Eka* means the one beyond or the next one in a family of elements. So, eka-silicon means the element beyond silicon in the same family as silicon.) The properties of these two elements are summarized in **Figure 3.3 ▼**.

However, Mendeleev did encounter some difficulties. For example, according to accepted values of atomic masses, tellurium (with higher mass) should come *after* iodine. But, based on their properties, Mendeleev placed tellurium *before* iodine and suggested that the mass of tellurium was erroneous. The mass was correct; later work by the English physicist Henry Moseley (1887–1915) showed that listing elements according to *atomic number*, rather than atomic mass, resolved this problem and resulted in even better correlation with elemental properties. Mendeleev's original listing evolved into the modern periodic





▲ Dmitri Mendeleev, a Russian chemistry professor who proposed the periodic law and arranged early versions of the periodic table, was honored on a Soviet postage stamp.

A Simple Periodic Table

1 H							2 He
3 Li	4 Be	5 B	6 C	7 N	8 O	9 F	10 Ne
11 Na	12 Mg	13 Al	14 Si	15 P	16 S	17 Cl	18 Ar
19 K	20 Ca						

Elements with similar properties fall into columns.

▲ FIGURE 3.2 Making a Periodic Table We can arrange the elements from Figure 3.1 in a table where atomic number increases from left to right and elements with similar properties (as represented by the different colors) are aligned in columns.

Gallium (eka-aluminum)			Germanium (eka-silicon)		
	Mendeleev's predicted properties	Actual properties		Mendeleev's predicted properties	Actual properties
Atomic mass	About 68 amu	69.72 amu	Atomic mass	About 72 amu	72.64 amu
Melting point	Low	29.8 °C	Density	5.5 g/cm ³	5.35 g/cm ³
Density	5.9 g/cm ³	5.90 g/cm ³	Formula of oxide	XO ₂	GeO ₂
Formula of oxide	X ₂ O ₃	Ga ₂ O ₃	Formula of chloride	XCl ₄	GeCl ₄
Formula of chloride	XCl ₃	GaCl ₃			

▲ FIGURE 3.3 Eka-aluminum and Eka-silicon Mendeleev's arrangement of elements in the periodic table allowed him to predict the existence of these elements, now known as gallium and germanium, and to anticipate their properties.

The Periodic Table

3.1
CcConceptual
ConnectionPEARSON
eText
2.0

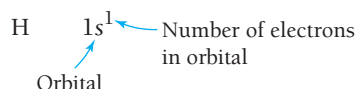
Which element is a transition metal?

- (a) Ca (b) Pb (c) Xe (d) Cr

3.3 Electron Configurations: How Electrons Occupy Orbitals

PEARSON
eText
2.0KEY CONCEPT VIDEO
Electron Configurations

As we saw in Chapter 2, electrons in atoms exist within orbitals. An **electron configuration** for an atom shows the particular orbitals that electrons occupy for that atom. For example, consider the **ground state**—or lowest energy state—electron configuration for a hydrogen atom:

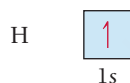


The electron configuration indicates that hydrogen's one electron is in the $1s$ orbital. Electrons generally occupy the lowest energy orbitals available. Since the $1s$ orbital is the lowest energy orbital in hydrogen (see Section 2.5), hydrogen's electron occupies that orbital. If we could write electron configurations for all the elements, we could see how the arrangements of the electrons within their atoms correlate with the element's chemical properties. However, the Schrödinger equation solutions (the atomic orbitals and their energies) described in Chapter 2 are for the hydrogen atom only. What do the atomic orbitals of *other atoms* look like? What are their relative energies?

The Schrödinger equation for multi-electron atoms includes terms to account for the interactions of the electrons with one another that make it too complicated to solve exactly. However, approximate solutions indicate that the orbitals in multi-electron atoms are hydrogen-like—they are similar to the s , p , d , and f orbitals we examined in Chapter 2. In order to see how the electrons in multi-electron atoms occupy these hydrogen-like orbitals, we must examine two additional concepts: *the effects of electron spin*, a fundamental property of all electrons that affects the number of electrons allowed in any one orbital; and *sublevel energy splitting*, which determines the order of orbital filling within a level.

Electron Spin and the Pauli Exclusion Principle

We can represent the electron configuration of hydrogen ($1s^1$) in a slightly different way with an **orbital diagram**, which is similar to an electron configuration but symbolizes the electron as an arrow and the orbital as a box. The orbital diagram for a hydrogen atom is:



In an orbital diagram, the direction of the arrow (pointing up or pointing down) represents the orientation of the *electron's spin*. Recall from Section 2.5 that the orientation of the electron's spin is quantized, with only two possibilities: spin up ($m_s = +\frac{1}{2}$) and spin down ($m_s = -\frac{1}{2}$). In an orbital diagram, we represent $m_s = +\frac{1}{2}$ with a half-arrow pointing up (\uparrow) and $m_s = -\frac{1}{2}$ with a half-arrow pointing down (\downarrow). In a collection of hydrogen atoms, the electrons in about half of the atoms are spin up and the electrons in the other half are spin down. Since no additional electrons are present within the hydrogen atom, we conventionally represent the hydrogen atom electron configuration with its one electron as spin up.

Helium is the first element on the periodic table that contains two electrons. Its two electrons occupy the $1s$ orbital.

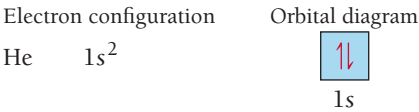


How do the spins of the two electrons in helium align relative to each other? The answer to this question is addressed by the **Pauli exclusion principle**, formulated by Wolfgang Pauli (1900–1958) in 1925:

Pauli exclusion principle: No two electrons in an atom can have the same four quantum numbers.

Because the two electrons occupying the same orbital have three identical quantum numbers (n , l , and m_l), they each must have a different spin quantum number. Since there are only two possible spin

quantum numbers ($+\frac{1}{2}$ and $-\frac{1}{2}$), the Pauli exclusion principle implies that *each orbital can have a maximum of only two electrons, with opposing spins*. By applying the exclusion principle, we can write an electron configuration and orbital diagram for helium:



The following table shows the four quantum numbers for each of the two electrons in helium.

n	l	m_l	m_s
1	0	0	$+\frac{1}{2}$
1	0	0	$-\frac{1}{2}$

The two electrons have three quantum numbers in common (because they are in the same orbital), but each electron has a different spin quantum number (as indicated by the opposing half-arrows in the orbital diagram).

Sublevel Energy Splitting in Multi-electron Atoms

A major difference in the (approximate) solutions to the Schrödinger equation for multi-electron atoms compared to the solutions for the hydrogen atom is the energy ordering of the orbitals. In the hydrogen atom, the energy of an orbital depends only on n , the principal quantum number. For example, the $3s$, $3p$, and $3d$ orbitals (which are empty for hydrogen in its lowest energy state) all have the same energy—we say they are **degenerate**. The orbitals within a principal level of a *multi-electron atom*, in contrast, are not degenerate—their energy depends on the value of l . We say that the energies of the sublevels are *split*. In general, the lower the value of l *within a principal level*, the lower the energy (E) of the corresponding orbital. Thus, for a given value of n :

$$E(s \text{ orbital}) < E(p \text{ orbital}) < E(d \text{ orbital}) < E(f \text{ orbital})$$

To understand why the sublevels split in this way, we must examine three key concepts associated with the energy of an electron in the vicinity of a nucleus: (1) Coulomb's law, which describes the interactions between charged particles; (2) shielding, which describes how one electron can shield another electron from the full charge of the nucleus; and (3) penetration, which describes how one atomic orbital can overlap spatially with another, thus penetrating into a region that is close to the nucleus (and therefore is less shielded from nuclear charge). We then examine how these concepts, together with the spatial distributions of electron probability for each orbital, result in the energy ordering presented above.

Coulomb's Law The attractions and repulsions between charged particles, first introduced in Section 1.6, are described by **Coulomb's law**, which states that the potential energy (E) of two charged particles depends on their charges (q_1 and q_2) and on their separation (r):

$$E = \frac{1}{4\pi\epsilon_0} \frac{q_1 q_2}{r} \tag{3.1}$$

In this equation, ϵ_0 is a constant ($\epsilon_0 = 8.85 \times 10^{-12} \text{ C}^2/\text{J}\cdot\text{m}$). The potential energy is positive for the interaction of charges with the same sign (plus \times plus, or minus \times minus) and negative for charges of the opposite sign (plus \times minus, or minus \times plus). The *magnitude* of the potential energy depends inversely on the separation between the charged particles.

We can draw three important conclusions from Coulomb's law:

- The potential energy (E) associated with the interaction of like charges is positive but decreases as the particles get *farther apart* (as r increases). Since systems tend toward lower potential energy (see Section 1.6), like charges that are close together have high potential energy and tend to move away from each other (toward lower potential energy). Like charges therefore repel one another (in much the same way that like poles of two magnets repel each other).

- The potential energy (E) associated with the interaction of unlike charges is negative and becomes more negative as the particles get closer together. Since systems tend toward lower potential energy, the interaction of unlike charges draws them closer together (toward lower potential energy). Unlike charges therefore attract one another (like the opposite poles of a magnet).
- The *magnitude* of the interaction between charged particles increases as the charges of the particles increase. Consequently, an electron with a charge of $1-$ is more strongly attracted to a nucleus with a charge of $2+$ than it is to a nucleus with a charge of $1+$.

Coulomb's Law

3.2

Cc

Conceptual
Connection

According to Coulomb's law, what happens to the potential energy of two oppositely charged particles as they get closer together?

- Their potential energy decreases.
- Their potential energy increases.
- Their potential energy does not change.

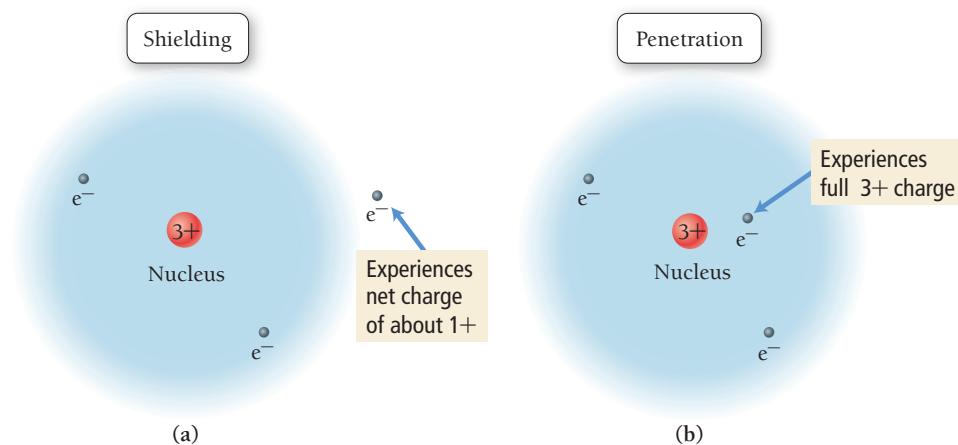
Shielding For multi-electron atoms, any single electron experiences both the positive charge of the nucleus (which is attractive) and the negative charges of the other electrons (which are repulsive). We can think of the repulsion of one electron by other electrons as *screening* or **shielding** that electron from the full effects of the nuclear charge.

For example, consider a lithium ion (Li^+). Because the lithium ion contains two electrons, its electron configuration is identical to that of helium:

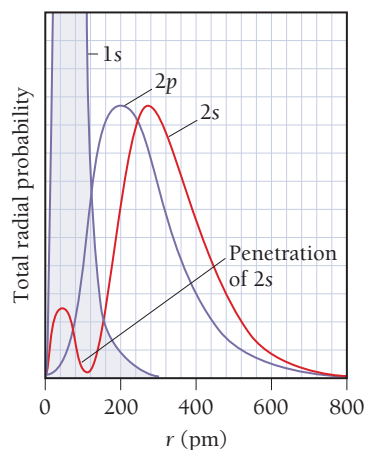


Now imagine bringing a third electron toward the lithium ion. When the third electron is far from the nucleus, it experiences the $3+$ charge of the nucleus through the *screen* or *shield* of the $2-$ charge of the two $1s$ electrons, as shown in **Figure 3.5a** ▼. We can think of the third electron as experiencing an **effective nuclear charge** (Z_{eff}) of approximately $1+(3+ \text{ from the nucleus and } 2- \text{ from the electrons, for a net charge of } 1+)$. The inner electrons in effect *shield* the outer electron from the full nuclear charge.

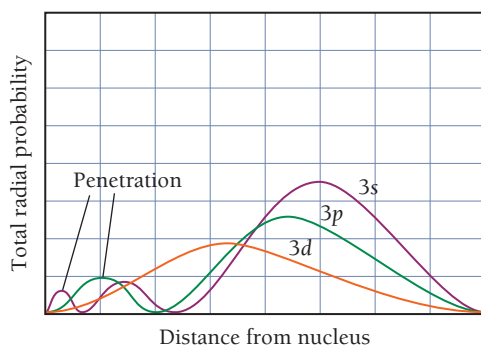
Penetration Now imagine that this third electron comes closer to the nucleus. As the electron *penetrates* the electron cloud of the $1s$ electrons, it begins to experience the $3+$ charge of the nucleus more fully because the third electron is less shielded by the intervening electrons. If the electron could somehow get closer to the nucleus than the $1s$ electrons, it would experience the full $3+$ charge, as shown in **Figure 3.5b** ▼. In other words, as the outer electron undergoes **penetration** into the region occupied by the inner electrons, it experiences a greater nuclear charge and therefore (according to Coulomb's law) a lower energy.



◀ **FIGURE 3.5 Shielding and Penetration** (a) An electron far from the nucleus is partly shielded by the electrons in the $1s$ orbital, reducing the effective net nuclear charge that it experiences. (b) An electron that penetrates the electron cloud of the $1s$ orbital experiences more of the nuclear charge.



▲ **FIGURE 3.6** Radial Distribution Functions for the 1s, 2s, and 2p Orbitals



▲ **FIGURE 3.7** Radial Distribution Functions for the 3s, 3p, and 3d Orbitals The 3s electrons penetrate most deeply into the inner orbitals, are least shielded, and experience the greatest effective nuclear charge. The 3d electrons penetrate least. This accounts for the energy ordering of the sublevels: $s < p < d$.

Electron Spatial Distributions and Sublevel Splitting We have now examined all of the concepts we need to understand the energy splitting of the sublevels within a principal level. The splitting is a result of the spatial distributions of electrons within a sublevel. Recall from Section 2.6 that the radial distribution function for an atomic orbital shows the total probability of finding the electron within a thin spherical shell at a distance r from the nucleus. **Figure 3.6** shows the radial distribution functions of the 2s and 2p orbitals superimposed on one another (the radial distribution function of the 1s orbital is also shown).

Notice that, in general, an electron in a 2p orbital has a greater probability of being found closer to the nucleus than an electron in a 2s orbital. We might initially expect, therefore, that the 2p orbital would be lower in energy. However, exactly the opposite is true—the 2s orbital is actually lower in energy *but only when the 1s orbital is occupied*. (When the 1s orbital is empty, the 2s and 2p orbitals are degenerate.) Why?


The reason is the bump near $r = 0$, the nucleus for the 2s orbital. This bump represents a significant probability of the electron being found very close to the nucleus. Even more importantly, this area of the probability penetrates into the 1s orbital—it gets into the region where shielding by the 1s electrons is less effective. In contrast, most of the probability in the radial distribution function of the 2p orbital lies *outside* the radial distribution function of the 1s orbital. Consequently, almost all of the 2p orbital is shielded from nuclear charge by the 1s orbital. The 2s orbital—because it experiences more of the nuclear charge due to its greater *penetration*—is lower in energy than the 2p orbital.

The situation is similar when we compare the 3s, 3p, and 3d orbitals. The s orbitals penetrate more fully than the p orbitals, which in turn penetrate more fully than the d orbitals, as shown in **Figure 3.7**.

Figure 3.8 shows the energy ordering of a number of orbitals in multi-electron atoms. Notice these features of Figure 3.8:

- Because of penetration, the sublevels of each principal level are *not* degenerate for multi-electron atoms.
- In the fourth and fifth principal levels, the effects of penetration become so important that the 4s orbital is lower in energy than the 3d orbitals and the 5s orbital is lower in energy than the 4d orbitals.
- The energy separations between one set of orbitals and the next become smaller for 4s orbitals and beyond, and the relative energy ordering of these orbitals can actually vary among elements. These variations result in irregularities in the electron configurations of the transition metals and their ions (as we shall see in Section 3.4).

General Energy Ordering of Orbitals for Multi-electron Atoms



► **FIGURE 3.8** General Energy Ordering of Orbitals for Multi-electron Atoms

Penetration and Shielding

3.3 Cc

Conceptual
Connection



Which statement is true?

- (a) An orbital that penetrates into the region occupied by core electrons is more shielded from nuclear charge than an orbital that does not penetrate and therefore has a higher energy.
- (b) An orbital that penetrates into the region occupied by core electrons is less shielded from nuclear charge than an orbital that does not penetrate and therefore has a higher energy.
- (c) An orbital that penetrates into the region occupied by core electrons is less shielded from nuclear charge than an orbital that does not penetrate and therefore has a lower energy.
- (d) An orbital that penetrates into the region occupied by core electrons is more shielded from nuclear charge than an orbital that does not penetrate and therefore has a lower energy.

Electron Configurations for Multi-electron Atoms

Now that we know the energy ordering of orbitals in multi-electron atoms, we can determine ground state electron configurations for the rest of the elements. Because electrons occupy the lowest energy orbitals available when the atom is in its ground state, and only two electrons (with opposing spins) are allowed in each orbital, we can systematically build up the electron configurations for the elements. This pattern of orbital filling is known as the **aufbau principle** (the German word *aufbau* means “build up”).

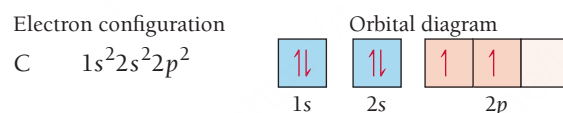
For lithium, with three electrons, the electron configuration and orbital diagram are:



Unless otherwise specified, we use the term *electron configuration* to mean the ground state (or lowest energy) configuration.

Remember that the number of electrons in a neutral atom is equal to its atomic number.

For carbon, which has six electrons, the electron configuration and orbital diagram are:



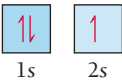
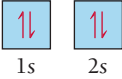
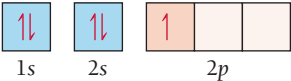
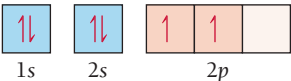
Notice that the $2p$ electrons occupy the p orbitals (of equal energy) singly, rather than pairing in one orbital. This way of filling orbitals follows **Hund's rule**, which states that *when filling degenerate orbitals, electrons fill them singly first, with parallel spins*. Hund's rule is a result of an atom's tendency to find the lowest energy state possible. When two electrons occupy separate orbitals of equal energy, the repulsive interaction between them is lower than when they occupy the same orbital because the electrons are spread out over a larger region of space. By convention, we denote these parallel spins with half arrows pointing up.

Electrons with parallel spins have correlated motion that minimizes their mutual repulsion.

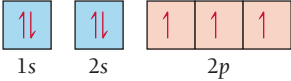
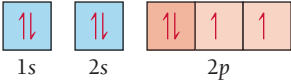
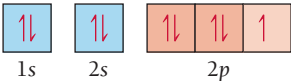
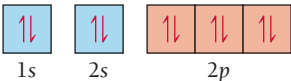
Summarizing Orbital Filling

- Electrons occupy orbitals so as to minimize the energy of the atom; therefore, lower-energy orbitals fill before higher-energy orbitals. Orbitals fill in the following order: $1s 2s 2p 3s 3p 4s 3d 4p 5s 4d 5p 6s$.
- Orbitals can hold no more than two electrons each. When two electrons occupy the same orbital, their spins are opposite. This is another way of expressing the Pauli exclusion principle (no two electrons in one atom can have the same four quantum numbers).
- When orbitals of identical energy are available, electrons first occupy these orbitals singly with parallel spins rather than in pairs (Hund's rule). Once the orbitals of equal energy are half-full, the electrons start to pair.

Consider the electron configurations and orbital diagrams for the elements with atomic numbers 3–10:

Symbol	Number of electrons	Electron configuration	Orbital diagram
Li	3	$1s^2 2s^1$	
Be	4	$1s^2 2s^2$	
B	5	$1s^2 2s^2 2p^1$	
C	6	$1s^2 2s^2 2p^2$	

Notice that, as a result of Hund's rule, the p orbitals fill with single electrons before the electrons pair:

N	7	$1s^2 2s^2 2p^3$	
O	8	$1s^2 2s^2 2p^4$	
F	9	$1s^2 2s^2 2p^5$	
Ne	10	$1s^2 2s^2 2p^6$	

The electron configuration of neon represents the complete filling of the $n = 2$ principal level. When writing electron configurations for elements beyond neon, or beyond any other noble gas, we abbreviate the electron configuration of the previous noble gas—sometimes called the *inner electron configuration*—by the symbol for the noble gas in square brackets. For example, the electron configuration of sodium is:



We write this configuration more compactly by using [Ne] to represent the inner electrons:



[Ne] represents $1s^2 2s^2 2p^6$, the electron configuration for neon.

To write an electron configuration for an element, we first find its atomic number from the periodic table—this number equals the number of electrons. Then we use the order of filling to distribute the electrons in the appropriate orbitals. Remember that each orbital can hold a maximum of two electrons. Consequently,

- The s sublevel has only one orbital and can therefore hold only two electrons.
- The p sublevel has three orbitals and can hold six electrons.
- The d sublevel has five orbitals and can hold ten electrons.
- The f sublevel has seven orbitals and can hold 14 electrons.

EXAMPLE 3.1

Electron Configurations

Write the electron configuration for each element.

(a) Mg (b) P (c) Br (d) Al

SOLUTION

(a) Mg Magnesium has 12 electrons. Distribute two electrons into the 1s orbital, two into the 2s orbital, six into the 2p orbitals, and two into the 3s orbital.	Mg $1s^2 2s^2 2p^6 3s^2$ or [Ne] $3s^2$
(b) P Phosphorus has 15 electrons. Distribute two electrons into the 1s orbital, two into the 2s orbital, six into the 2p orbitals, two into the 3s orbital, and three into the 3p orbitals.	P $1s^2 2s^2 2p^6 3s^2 3p^3$ or [Ne] $3s^2 3p^3$
(c) Br Bromine has 35 electrons. Distribute two electrons into the 1s orbital, two into the 2s orbital, six into the 2p orbitals, two into the 3s orbital, six into the 3p orbitals, two into the 4s orbital, ten into the 3d orbitals, and five into the 4p orbitals.	Br $1s^2 2s^2 2p^6 3s^2 3p^6 4s^2 3d^{10} 4p^5$ or [Ar] $4s^2 3d^{10} 4p^5$
(d) Al Aluminum has 13 electrons. Distribute two electrons into the 1s orbital, two into the 2s orbital, six into the 2p orbitals, two into the 3s orbital, and one into the 3p orbital.	Al $1s^2 2s^2 2p^6 3s^2 3p^1$ or [Ne] $3s^2 3p^1$

FOR PRACTICE 3.1

Write the electron configuration for each element.

(a) Cl (b) Si (c) Sr (d) O

EXAMPLE 3.2

Writing Orbital Diagrams

Write the orbital diagram for sulfur and determine its number of unpaired electrons.

SOLUTION

Sulfur's atomic number is 16, so it has 16 electrons and the electron configuration $1s^2 2s^2 2p^6 3s^2 3p^4$. Draw a box for each orbital, putting the lowest energy orbital (1s) on the far left and proceeding to orbitals of higher energy to the right.	<div><div>□</div>1s</div> <div><div>□</div>2s</div> <div><div>□ □ □</div>2p</div> <div><div>□</div>3s</div> <div><div>□ □ □</div>3p</div>
Distribute the 16 electrons into the boxes representing the orbitals, allowing a maximum of two electrons per orbital and obeying Hund's rule. You can see from the diagram that sulfur has two unpaired electrons.	<div><div>↑↓</div>1s</div> <div><div>↑↓</div>2s</div> <div><div>↑↓ ↑↓ ↑↓</div>2p</div> <div><div>↑↓</div>3s</div> <div><div>↑↓ ↑ 1</div>3p</div> <div>Two unpaired electrons</div>

FOR PRACTICE 3.2

Write the orbital diagram for Ar and determine its number of unpaired electrons.



3.4

Cc

Conceptual
Connection

Electron Configurations and Quantum Numbers

What are the four quantum numbers for each of the two electrons in a 4s orbital?



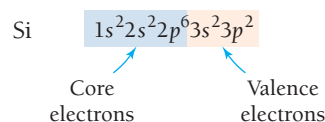
KEY CONCEPT VIDEO
**Writing an Electron Configuration
Based on an Element's Position
on the Periodic Table**

3.4 Electron Configurations, Valence Electrons, and the Periodic Table

Recall from Section 3.2 that Mendeleev arranged the periodic table so that elements with similar chemical properties lie in the same column. We can begin to make the connection between an element's properties and its electron configuration by superimposing the electron configurations of the first 18 elements onto a partial periodic table, as shown in **Figure 3.9** ▼. As we move to the right across a row (which is also called a period), the orbitals fill in the correct order. With each subsequent row, the highest principal quantum number increases by one. Notice that as we move down a column, *the number of electrons in the outermost principal energy level (highest n value) remains the same*. The key connection between the macroscopic world (an element's chemical properties) and the particulate world (an atom's electronic structure) lies in these outermost electrons.

An atom's **valence electrons** are the most important in chemical bonding. *For main-group elements, the valence electrons are those in the outermost principal energy level.* For transition elements, we also count the outermost d electrons among the valence electrons (even though they are not in an outermost principal energy level). The chemical properties of an element depend on its valence electrons, which are instrumental in bonding because they are held most loosely (and are therefore the easiest to lose or share). We can now see *why* the elements in a column of the periodic table have similar chemical properties: *They have the same number of valence electrons.*

We distinguish valence electrons from all the other electrons in an atom, which we call **core electrons**. The core electrons are those in *complete* principal energy levels and those in *complete* d and f sublevels. For example, silicon, with the electron configuration $1s^2 2s^2 2p^6 3s^2 3p^2$ has four valence electrons (those in the $n = 3$ principal level) and ten core electrons:



Outer Electron Configurations of Elements 1–18

1A	2A	3A	4A	5A	6A	7A	8A
1 H $1s^1$							2 He $1s^2$
3 Li $2s^1$	4 Be $2s^2$	5 B $2s^2 2p^1$	6 C $2s^2 2p^2$	7 N $2s^2 2p^3$	8 O $2s^2 2p^4$	9 F $2s^2 2p^5$	10 Ne $2s^2 2p^6$
11 Na $3s^1$	12 Mg $3s^2$	13 Al $3s^2 3p^1$	14 Si $3s^2 3p^2$	15 P $3s^2 3p^3$	16 S $3s^2 3p^4$	17 Cl $3s^2 3p^5$	18 Ar $3s^2 3p^6$

Number of electrons in outermost level remains constant.

▲ **FIGURE 3.9** Outer Electron Configurations of the First 18 Elements in the Periodic Table

Helium is an exception. Even though it lies in the column with an outer electron configuration of $ns^2 np^6$, its electron configuration is simply $1s^2$.

Recall from Section 3.2 that main-group elements are those in the two far-left columns (groups 1A and 2A) and the six far-right columns (groups 3A–8A) of the periodic table.

into blocks representing the filling of particular sublevels. The first two columns on the left side of the periodic table constitute the *s* block, with outer electron configurations of ns^1 (group 1A) and ns^2 (group 2A). The six columns on the right side of the periodic table constitute the *p* block, with outer electron configurations of ns^2np^1 , ns^2np^2 , ns^2np^3 , ns^2np^4 , ns^2np^5 , and ns^2np^6 . Together, the *s* and *p* blocks constitute the *main-group* elements. The *transition* elements constitute the *d* block, and the lanthanides and actinides (also called the inner transition elements) constitute the *f* block. (For compactness, the *f* block is typically printed below the *d* block instead of being embedded within it.)

Note also that the number of columns in a block corresponds to the maximum number of electrons that can occupy the particular sublevel of that block. The *s* block has two columns (corresponding to one *s* orbital holding a maximum of two electrons); the *p* block has six columns (corresponding to three *p* orbitals with two electrons each); the *d* block has ten columns (corresponding to five *d* orbitals with two electrons each); and the *f* block has 14 columns (corresponding to seven *f* orbitals with two electrons each).

Except for helium, *the number of valence electrons for any main-group element is equal to its lettered group number*. For example, we know that chlorine has seven valence electrons because it is in group number 7A.

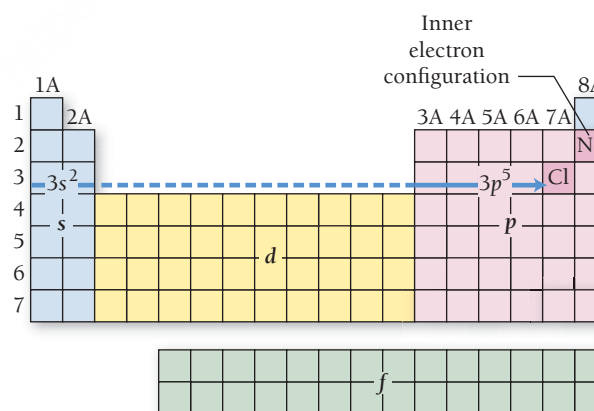
Lastly, note that, for main-group elements, *the row number in the periodic table is equal to the number (or n value) of the highest principal level*. For example, because chlorine is in row 3, its highest principal level is the $n = 3$ level.

Summarizing Periodic Table Organization

- The periodic table is divisible into four blocks corresponding to the filling of the four quantum sublevels (s , p , d , and f).
- The lettered group number of a main-group element is equal to the number of valence electrons for that element.
- The row number of a main-group element is equal to the highest principal quantum number of that element.

Writing an Electron Configuration for an Element from Its Position in the Periodic Table

The organization of the periodic table allows us to write the electron configuration for any element based on its position in the periodic table. For example, suppose we want to write an electron configuration for Cl. The *inner electron configuration* of Cl is that of the noble gas that precedes it in the periodic table, Ne. So we represent the inner electron configuration with [Ne]. We obtain the *outer electron configuration*—the configuration of the electrons beyond the previous noble gas—by tracing the elements between Ne and Cl and assigning electrons to the appropriate orbitals, as shown here. Remember that the highest n value is indicated by the row number (3 for chlorine).



We begin with [Ne], then add in the two 3s electrons as we trace across the s block, followed by five 3p electrons as we trace across the p block to Cl, which is in the fifth column of the p block. The electron configuration is:



Notice that Cl is in column 7A and therefore has seven valence electrons and an outer electron configuration of $ns^2 np^5$.

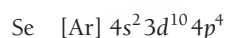
EXAMPLE 3.4**Writing Electron Configurations from the Periodic Table**Interactive
Worked Example
Video 3.4PEARSON
eText
2.0

Refer to the periodic table to write the electron configuration for selenium (Se).

SOLUTION

The atomic number of Se is 34. The noble gas that precedes Se in the periodic table is argon, so the inner electron configuration is [Ar].

Obtain the outer electron configuration by tracing the elements between Ar and Se and assigning electrons to the appropriate orbitals. Begin with [Ar]. Because Se is in row 4, add two 4s electrons as you trace across the s block ($n = \text{row number}$). Next, add ten 3d electrons as you trace across the d block ($n = \text{row number} - 1$). (See explanation after example.) Lastly, add four 4p electrons as you trace across the p block to Se, which is in the fourth column of the p block ($n = \text{row number}$).

**FOR PRACTICE 3.4**

Refer to the periodic table to write the electron configuration of bismuth (Bi).

FOR MORE PRACTICE 3.4

Refer to the periodic table to write the electron configuration for iodine (I).

The Transition and Inner Transition Elements

The electron configurations of the transition elements (d block) and inner transition elements (f block) exhibit trends that differ somewhat from those of the main-group elements. As we move to the right across a row in the d block, the d orbitals fill as shown here:

21	22	23	24	25	26	27	28	29	30
Sc	Ti	V	Cr	Mn	Fe	Co	Ni	Cu	Zn
$4s^2 3d^1$	$4s^2 3d^2$	$4s^2 3d^3$	$4s^1 3d^5$	$4s^2 3d^5$	$4s^2 3d^6$	$4s^2 3d^7$	$4s^2 3d^8$	$4s^1 3d^{10}$	$4s^2 3d^{10}$
39	40	41	42	43	44	45	46	47	48
Y	Zr	Nb	Mo	Tc	Ru	Rh	Pd	Ag	Cd
$5s^2 4d^1$	$5s^2 4d^2$	$5s^1 4d^4$	$5s^1 4d^5$	$5s^2 4d^5$	$5s^1 4d^7$	$5s^1 4d^8$	$4d^{10}$	$5s^1 4d^{10}$	$5s^2 4d^{10}$

Note that the principal quantum number of the d orbitals that fill across each row in the transition series is equal to the row number minus one. In the fourth row, the 3d orbitals fill; in the fifth row, the 4d orbitals fill; and so on. This happens because, as we discussed in Section 3.3, the 4s orbital is generally lower in energy than the 3d orbital (because the 4s orbital more efficiently penetrates into the region occupied by the core electrons). The result is that the 4s orbital fills before the 3d orbital, even though its principal quantum number ($n = 4$) is higher.

Keep in mind, however, that the 4s and the 3d orbitals are extremely close to each other in energy so that their relative energy ordering depends on the exact species under consideration; this causes some irregular behavior in the transition metals. For example, in the first transition series of the d block, the outer configuration is $4s^2 3d^x$ with two exceptions: Cr is $4s^1 3d^5$ and Cu is $4s^1 3d^{10}$.

This behavior is related to the closely spaced $3d$ and $4s$ energy levels and the stability associated with a half-filled (as in Cr) or completely filled (as in Cu) sublevel. Actual electron configurations are determined experimentally (through spectroscopy) and do not always conform to the general pattern. Nonetheless, the patterns we have described allow us to accurately predict electron configurations for most of the elements in the periodic table.

As we move across the f block (the inner transition series), the f orbitals fill. For these elements, the principal quantum number of the f orbitals that fill across each row is the row number *minus two*. (In the sixth row, the $4f$ orbitals fill, and in the seventh row, the $5f$ orbitals fill.) In addition, within the inner transition series, the close energy spacing of the $5d$ and $4f$ orbitals sometimes causes an electron to enter a $5d$ orbital instead of the expected $4f$ orbital. For example, the electron configuration of gadolinium is $[\text{Xe}] 6s^2 4f^7 5d^1$ (instead of the expected $[\text{Xe}] 6s^2 4f^8$).

3.5 Electron Configurations and Elemental Properties

As we discussed in Section 3.4, *the chemical properties of elements are largely determined by the number of valence electrons the elements contain*. The properties of elements are periodic because the number of valence electrons is periodic. Mendeleev grouped elements into families (or columns) based on observations about their properties. We now know that elements in a family have the same number of valence electrons. In other words, elements in a family have similar properties because they have the same number of valence electrons.

Perhaps the most striking family in the periodic table is the column labeled 8A, known as the **noble gases**. The noble gases are generally inert—they are the most unreactive elements in the entire periodic table. Why? Notice that each noble gas has eight valence electrons (or two in the case of helium), and they all have full outer quantum levels. We do not cover the quantitative (or numerical) aspects of the quantum-mechanical model in this book, but calculations of the overall energy of the electrons within atoms with eight valence electrons (or two for helium) show that these atoms are particularly stable. *In other words, when a quantum level is completely full, the overall potential energy of the electrons that occupy that level is particularly low.*

Recall from Section E.6 that, on the one hand, systems with high potential energy tend to change in ways that lower their potential energy. Systems with low potential energy, on the other hand, tend not to change—they are stable. Because atoms with eight electrons (or two for helium) have particularly low potential energy, the noble gases are stable—they *cannot* lower their energy by reacting with other atoms or molecules.

We can explain a great deal of chemical behavior with the simple idea that *elements without a noble gas electron configuration react to attain a noble gas configuration*. This idea applies particularly well to main-group elements. In this section, we first apply this idea to help differentiate between metals and nonmetals. We then apply the idea to understand the properties of several individual families of elements. Lastly, we apply the idea to the formation of ions.

8A
2 He $1s^2$
10 Ne $2s^2 2p^6$
18 Ar $3s^2 3p^6$
36 Kr $4s^2 4p^6$
54 Xe $5s^2 5p^6$
86 Rn $6s^2 6p^6$
Noble gases

▲ The noble gases each have eight valence electrons except for helium, which has two. They have full outer quantum levels and are particularly stable and unreactive.

Metals and Nonmetals

We can understand the broad chemical behavior of the elements by superimposing one of the most general properties of an element—whether it is a metal or nonmetal—with its outer electron configuration in the form of a periodic table (**Figure 3.11** ►). **Metals** lie on the lower left side and middle of the periodic table and share some common properties: They are good conductors of heat and electricity; they can be pounded into flat sheets (malleability); they can be drawn into wires (ductility); they are often shiny; and most importantly, *they tend to lose electrons when they undergo chemical changes*.

For example, sodium is among the most reactive metals. Its electron configuration is $1s^2 2s^2 2p^6 3s^1$. Notice that its electron configuration is one electron beyond the configuration of neon, a noble gas. Sodium can attain a noble gas electron configuration by losing that one valence electron—and that is exactly what it does. When we find sodium in nature, we most often find it as Na^+ , which has the electron configuration of neon ($1s^2 2s^2 2p^6$). The other main-group metals in the periodic table behave similarly: They tend to lose their valence electrons in chemical changes to attain noble gas electron configurations. The transition metals also tend to lose electrons in their chemical changes, but they do not generally attain noble gas electron configurations.

Major Divisions of the Periodic Table

Metals Metalloids Nonmetals

1A 1 1 H 1s ¹	2A 2 2 He 1s ²																
3 3 Li 2s ¹	4 4 Be 2s ²																
11 11 Na 3s ¹	12 12 Mg 3s ²	3B 3 3 3s ² 3d ¹	4B 4 4 3s ² 3d ²	5B 5 5 3s ² 3d ³	6B 6 6 3s ² 3d ⁴	7B 7 7 3s ² 3d ⁵	8 8 8 3s ² 3d ⁶	9 9 9 3s ² 3d ⁷	10 10 10 3s ² 3d ⁸	11 11 11 3s ² 3d ⁹	12 12 12 3s ² 3d ¹⁰	13 13 Al 3s ² 3p ¹	14 14 Si 3s ² 3p ²	15 15 P 3s ² 3p ³	16 16 S 3s ² 3p ⁴	17 17 Cl 3s ² 3p ⁵	18 18 Ar 3s ² 3p ⁶
19 19 K 4s ¹	20 20 Ca 4s ²	21 21 Sc 4s ² 3d ¹	22 22 Ti 4s ² 3d ²	23 23 V 4s ² 3d ³	24 24 Cr 4s ¹ 3d ⁵	25 25 Mn 4s ² 3d ⁵	26 26 Fe 4s ² 3d ⁶	27 27 Co 4s ² 3d ⁷	28 28 Ni 4s ² 3d ⁸	29 29 Cu 4s ¹ 3d ¹⁰	30 30 Zn 4s ² 3d ¹⁰	31 31 Ga 4s ² 4p ¹	32 32 Ge 4s ² 4p ²	33 33 As 4s ² 4p ³	34 34 Se 4s ² 4p ⁴	35 35 Br 4s ² 4p ⁵	36 36 Kr 4s ² 4p ⁶
37 37 Rb 5s ¹	38 38 Sr 5s ²	39 39 Y 5s ² 4d ¹	40 40 Zr 5s ² 4d ²	41 41 Nb 5s ¹ 4d ⁴	42 42 Mo 5s ¹ 4d ⁵	43 43 Tc 5s ² 4d ⁵	44 44 Ru 5s ¹ 4d ⁷	45 45 Rh 5s ¹ 4d ⁸	46 46 Pd 4d ¹⁰	47 47 Ag 5s ¹ 4d ¹⁰	48 48 Cd 5s ² 4d ¹⁰	49 49 In 5s ² 5p ¹	50 50 Sn 5s ² 5p ²	51 51 Sb 5s ² 5p ³	52 52 Te 5s ² 5p ⁴	53 53 I 5s ² 5p ⁵	54 54 Xe 5s ² 5p ⁶
55 55 Cs 6s ¹	56 56 Ba 6s ²	57 57 La 6s ² 5d ¹	72 72 Hf 6s ² 5d ²	73 73 Ta 6s ² 5d ³	74 74 W 6s ² 5d ⁴	75 75 Re 6s ² 5d ⁵	76 76 Os 6s ² 5d ⁶	77 77 Ir 6s ² 5d ⁷	78 78 Pt 6s ¹ 5d ⁹	79 79 Au 6s ¹ 5d ¹⁰	80 80 Hg 6s ² 5d ¹⁰	81 81 Tl 6s ² 6p ¹	82 82 Pb 6s ² 6p ²	83 83 Bi 6s ² 6p ³	84 84 Po 6s ² 6p ⁴	85 85 At 6s ² 6p ⁵	86 86 Rn 6s ² 6p ⁶
87 87 Fr 7s ¹	88 88 Ra 7s ²	89 89 Ac 7s ² 6d ¹	104 104 Rf 7s ² 6d ²	105 105 Db 7s ² 6d ³	106 106 Sg 7s ² 6d ⁴	107 107 Bh 7s ² 6d ⁵	108 108 Hs 7s ² 6d ⁶	109 109 Mt 7s ² 6d ⁷	110 110 Ds 7s ² 6d ⁸	111 111 Rg 7s ² 6d ⁹	112 112 Cn 7s ² 6d ¹⁰	113 113 Nh 7s ² 6p ¹	114 114 Fl 7s ² 6p ²	115 115 Mc 7s ² 6p ³	116 116 Lv 7s ² 6p ⁴	117 117 Ts 7s ² 6p ⁵	118 118 Og 7s ² 6p ⁶

Lanthanides

58 58 Ce 6s ² 4f ¹ 5d ¹	59 59 Pr 6s ² 4f ³	60 60 Nd 6s ² 4f ⁴	61 61 Pm 6s ² 4f ⁵	62 62 Sm 6s ² 4f ⁶	63 63 Eu 6s ² 4f ⁷	64 64 Gd 6s ² 4f ⁷ 5d ¹	65 65 Tb 6s ² 4f ⁹	66 66 Dy 6s ² 4f ¹⁰	67 67 Ho 6s ² 4f ¹¹	68 68 Er 6s ² 4f ¹²	69 69 Tm 6s ² 4f ¹³	70 70 Yb 6s ² 4f ¹⁴	71 71 Lu 6s ² 4f ¹⁴ 5d ¹
--	--	--	--	--	--	--	--	---	---	---	---	---	---

Actinides

90 90 Th 7s ² 6d ²	91 91 Pa 7s ² 5f ² 6d ¹	92 92 U 7s ² 5f ³ 6d ¹	93 93 Np 7s ² 5f ⁴ 6d ¹	94 94 Pu 7s ² 5f ⁶	95 95 Am 7s ² 5f ⁷	96 96 Cm 7s ² 5f ⁷ 6d ¹	97 97 Bk 7s ² 5f ⁹	98 98 Cf 7s ² 5f ¹⁰	99 99 Es 7s ² 5f ¹¹	100 100 Fm 7s ² 5f ¹²	101 101 Md 7s ² 5f ¹³	102 102 No 7s ² 5f ¹⁴	103 103 Lr 7s ² 5f ¹⁴ 6d ¹
--	--	---	--	--	--	--	--	---	---	---	---	---	---

▲ FIGURE 3.11 Metallic Behavior and Electron Configuration The elements in the periodic table fall into three broad classes: metals, metalloids, and nonmetals. Notice the correlations between elemental properties and electron configurations.

Nonmetals lie on the upper right side of the periodic table. The division between metals and nonmetals is the zigzag diagonal line running from boron to astatine. Nonmetals have varied properties—some are solids at room temperature, others are liquids or gases—but as a whole they tend to be poor conductors of heat and electricity, and most importantly *they all tend to gain electrons when they undergo chemical changes*.

Chlorine is among the most reactive nonmetals. Its electron configuration is $1s^2 2s^2 2p^6 3s^2 3p^5$. Notice that its electron configuration is one electron short of the configuration of argon, a noble gas. Chlorine can attain a noble gas electron configuration by gaining one electron—and that is exactly what it does. When we find chlorine in nature, we often find it as Cl^- , which has the electron configuration of argon ($1s^2 2s^2 2p^6 3s^2 3p^6$). The other nonmetals in the periodic table behave similarly: They tend to gain electrons in chemical changes to attain noble gas electron configurations.

Many of the elements that lie along the zigzag diagonal line that divides metals and nonmetals are **metalloids** and exhibit mixed properties. Several metalloids are classified as **semiconductors** because of their intermediate (and highly temperature-dependent) electrical conductivity. Our ability to change and control the conductivity of semiconductors makes them useful in the manufacture of the electronic chips and circuits central to computers, cellular telephones, and many other devices. Examples of metalloids include silicon, arsenic, and antimony.

Metalloids are sometimes called semimetals.

Families of Elements

We can also understand the properties of families of elements (those in the same column in the periodic table) based on their electron configurations. We have already seen that the group 8A elements, called the *noble gases*, have eight valence electrons and are mostly unreactive. The most familiar noble gas is

2A	7A
4 Be 2s ²	9 F 2s ² 2p ⁵
12 Mg 3s ²	17 Cl 3s ² 3p ⁵
20 Ca 4s ²	35 Br 4s ² 4p ⁵
38 Sr 5s ²	53 I 5s ² 5p ⁵
56 Ba 6s ²	85 At 6s ² 6p ⁵
88 Ra 7s ²	
Alkaline earth metals	Halogens

probably helium, used to fill buoyant balloons. Helium is chemically stable—it does not combine with other elements to form compounds—and is therefore safe to put into balloons. Other noble gases are neon (often used in electronic signs), argon (a small component of our atmosphere), krypton, and xenon.

The group 1A elements, called the **alkali metals**, all have an outer electron configuration of ns^1 . Like sodium, a member of this family, the alkali metals have electron configurations that are one electron beyond a noble gas electron configuration. In their reactions, alkali metals readily, and sometimes violently, lose the ns^1 electron to form ions with a 1+ charge. A marble-sized piece of sodium, for example, explodes violently when dropped into water. Lithium, potassium, and rubidium are also alkali metals.

The group 2A elements, called the **alkaline earth metals**, all have an outer electron configuration of ns^2 . They have electron configurations that are two electrons beyond a noble gas configuration. In their reactions, they tend to lose the two ns^2 electrons—though not quite as violently as the alkali metals—to form ions with a 2+ charge. Calcium, for example, reacts fairly vigorously when dropped into water but does not explode as dramatically as sodium. Magnesium (a common low-density structural metal), strontium, and barium are other alkaline earth metals.

The group 7A elements, the **halogens**, all have an outer electron configuration of ns^2np^5 . Like chlorine, a member of this family, their electron configurations are one electron short of a noble gas configuration. Consequently, in their reactions with metals, halogens tend to gain one electron to form ions with a 1− charge. Chlorine, a greenish-yellow gas with a pungent odor, is one of the most familiar halogens. Because of its reactivity, chlorine is used as a sterilizing and disinfecting agent. Other halogens are bromine, a red-brown liquid that easily evaporates into a gas; iodine, a purple solid; and fluorine, a pale-yellow gas.

The Formation of Ions

In Section 1.8, we learned that atoms can lose or gain electrons to form ions. We have just seen that metals tend to form positively charged ions (cations) and nonmetals tend to form negatively charged ions (anions). A number of main-group elements in the periodic table always form ions with a noble gas electron configuration. Consequently, we can reliably predict their charges (**Figure 3.12 ▼**).

As we have already seen, the alkali metals tend to form cations with a 1+ charge, the alkaline earth metals tend to form ions with a 2+ charge, and the halogens tend to form ions with a 1− charge. In each of these cases, the ions have noble gas electron configurations. This is true of the rest of the ions in Figure 3.12. Nitrogen, for example, has an electron configuration of $1s^2 2s^2 2p^3$. The N^{3-} ion has three additional electrons and an electron configuration of $1s^2 2s^2 2p^6$, which is the same as the configuration of neon, the nearest noble gas.

Notice that, for the main-group elements that form cations with predictable charge, the charge is equal to the group number. For main-group elements that form anions with predictable charge, the charge is equal to the group number minus eight. Transition elements may form various ions with different charges.

The tendency for many main-group elements to form ions with noble gas electron configurations *does not* mean that the process is in itself energetically favorable. In fact, forming cations always requires energy, and forming anions sometimes requires energy as well. However, the energy cost of forming a cation or anion with a noble gas configuration is often less than the energy payback that occurs when that cation or anion forms chemical bonds, as we shall see in Chapter 4.

Elements That Form Ions with Predictable Charges

	1A	2A										3A	4A	5A	6A	7A	8A
1	Li ⁺													N ^{3−}	O ^{2−}	F [−]	
2	Na ⁺	Mg ⁺¹										Al ³⁺			S ^{2−}	Cl [−]	
3	K ⁺	Ca ⁺¹													Se ^{2−}	Br [−]	
4	Rb ⁺	Sr ⁺¹													Te ^{2−}	I [−]	
5	Cs ⁺	Ba ⁺¹															

▲ FIGURE 3.12 Elements That Form Ions with Predictable Charges

EXAMPLE 3.5

Predicting the Charge of Ions

Predict the charges of the monoatomic (single atom) ions formed by each main-group element.

- (a) Al
(b) S

SOLUTION

- (a) Aluminum is a main-group metal and tends to lose electrons to form a cation with the same electron configuration as the nearest noble gas. The electron configuration of aluminum is $1s^2 2s^2 2p^6 3s^2 3p^1$. The nearest noble gas is neon, which has an electron configuration of $1s^2 2s^2 2p^6$. Therefore, aluminum loses three electrons to form the cation Al^{3+} .
- (b) Sulfur is a nonmetal and tends to gain electrons to form an anion with the same electron configuration as the nearest noble gas. The electron configuration of sulfur is $1s^2 2s^2 2p^6 3s^2 3p^4$. The nearest noble gas is argon, which has an electron configuration of $1s^2 2s^2 2p^6 3s^2 3p^6$. Therefore, sulfur gains two electrons to form the anion S^{2-} .

FOR PRACTICE 3.5

Predict the charges of the monoatomic ions formed by each main-group element.

- (a) N
(b) Rb

3.6 Periodic Trends in Atomic Size and Effective Nuclear Charge

In previous chapters, we saw that the volume of an atom is taken up primarily by its electrons (Chapter 1) occupying quantum-mechanical orbitals (Chapter 2). We also saw that these orbitals do not have a definite boundary but represent only a statistical probability distribution for where the electron is found. So how do we define the size of an atom? One way to define atomic radii is to consider the distance between *nonbonding* atoms that are in direct contact. For example, krypton can be frozen into a solid in which the krypton atoms are touching each other but are not bonded together. The distance between the centers of adjacent krypton atoms—which can be determined from the solid's density—is then twice the radius of a krypton atom. An atomic radius determined in this way is the **nonbonding atomic radius** or the **van der Waals radius**. The van der Waals radius represents the radius of an atom when it is not bonded to another atom.

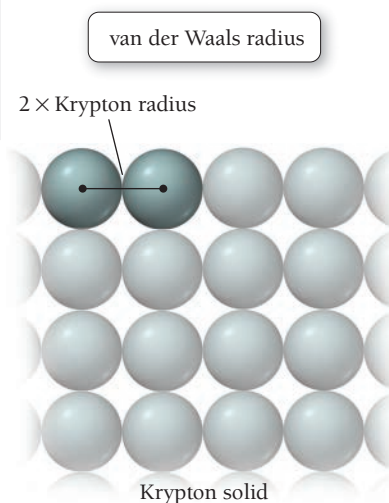
Another way to define the size of an atom, the **bonding atomic radius** or **covalent radius**, is defined differently for nonmetals and metals, as follows:

Nonmetals: one-half the distance between two of the atoms bonded together

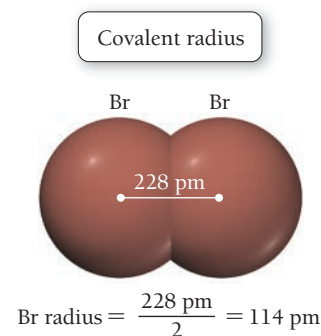
Metals: one-half the distance between two of the atoms next to each other in a crystal of the metal

For example, the distance between Br atoms in Br_2 is 228 pm; therefore, the Br covalent radius is assigned to be one-half of 228 pm, or 114 pm.

Using this method, we can assign radii to all elements in the periodic table that form chemical bonds or form metallic crystals. A more general term, the **atomic radius**, refers to a set of average bonding radii determined from measurements on a large number of elements and compounds. The atomic radius represents the radius of an atom when it is bonded to another atom and is always smaller than the van der Waals radius. The approximate bond length of any two covalently bonded atoms is the sum of their atomic radii. For example, the approximate bond length for ICl is iodine's atomic radius (133 pm) plus chlorine's atomic radius (99 pm), for a bond length of 232 pm. (The actual experimentally measured bond length in ICl is 232.07 pm.)



▲ The van der Waals radius of an atom is one-half the distance between adjacent nuclei in the atomic solid.



▲ The covalent radius of bromine is one-half the distance between two bonded bromine atoms.

► **FIGURE 3.13 Atomic Radius versus Atomic Number** Notice the periodic trend in the atomic radius, starting at a peak with each alkali metal and falling to a minimum with each noble gas.

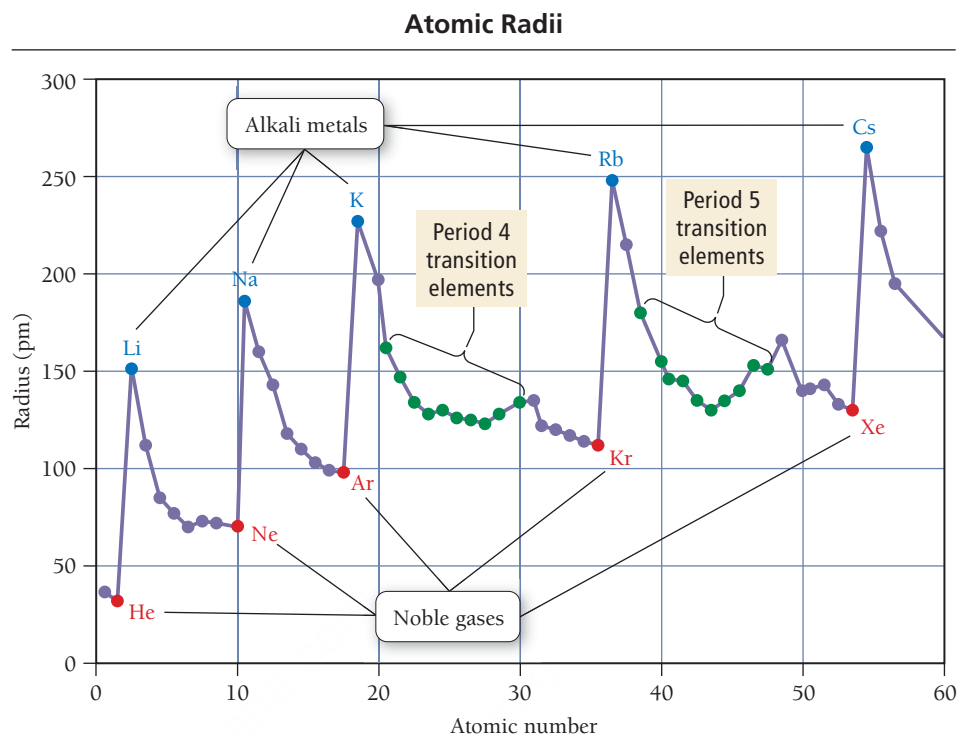
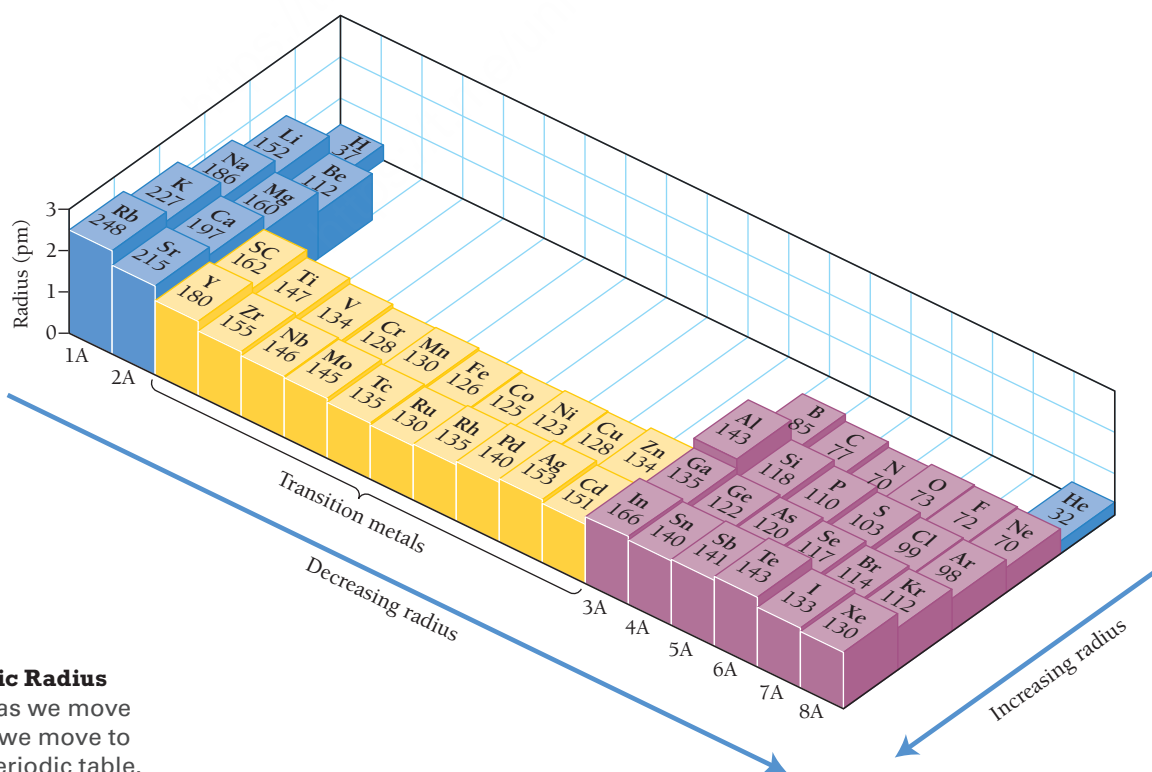


Figure 3.13 ▲ shows the atomic radius plotted as a function of atomic number for the first 57 elements in the periodic table. Notice the periodic trend in the radii. Atomic radii peak with each alkali metal. **Figure 3.14** ▼ is a relief map of atomic radii for most of the elements in the periodic table.

Trends in Atomic Radius



► **FIGURE 3.14 Trends in Atomic Radius** In general, atomic radii increase as we move down a column and decrease as we move to the right across a period in the periodic table.

The general trends in the atomic radii of main-group elements, which are the same as trends observed in van der Waals radii, are as follows:

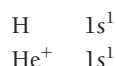
1. As we move down a column (or family) in the periodic table, the atomic radius increases.
2. As we move to the right across a period (or row) in the periodic table, the atomic radius decreases.

We can understand the observed trend in radius as we move down a column based on the trends in the sizes of atomic orbitals. The atomic radius is largely determined by the valence electrons, the electrons farthest from the nucleus. As we move down a column in the periodic table, the highest principal quantum number (n) of the valence electrons increases. Consequently, the valence electrons occupy larger orbitals, resulting in larger atoms.

The observed trend in atomic radius as we move to the right across a row, however, is a bit more complex. To understand this trend, we now revisit some concepts from Section 3.3, including effective nuclear charge and shielding.

Effective Nuclear Charge

The trend in atomic radius as we move to the right across a row in the periodic table is determined by the inward pull of the nucleus on the electrons in the outermost principal energy level (highest n value). According to Coulomb's law, the attraction between a nucleus and an electron increases with increasing magnitude of nuclear charge. For example, compare the H atom to the He^+ ion:



It takes 1312 kJ/mol of energy to remove the $1s$ electron from H, but 5251 kJ/mol of energy to remove it from He^+ . Why? Although each electron is in a $1s$ orbital, the electron in the helium ion is attracted to the nucleus by a $2+$ charge, while the electron in the hydrogen atom is attracted to the nucleus by only a $1+$ charge. Therefore, the electron in the helium ion is held more tightly (it has lower potential energy according to Coulomb's law), making it more difficult to remove and making the helium ion smaller than the hydrogen atom.

As we saw in Section 3.3, any one electron in a multi-electron atom experiences both the positive charge of the nucleus (which is attractive) and the negative charges of the other electrons (which are repulsive). Consider again the outermost electron in the lithium atom:



As shown in **Figure 3.15**, even though the $2s$ orbital penetrates into the $1s$ orbital to some degree, the majority of the $2s$ orbital is outside of the $1s$ orbital. Therefore, the electron in the $2s$ orbital is partially *screened* or *shielded* from the $3+$ charge of the nucleus by the $2-$ charge of the $1s$ (or core) electrons, reducing the net charge experienced by the $2s$ electron.

Recall from Section 3.3 that we define the average or net charge experienced by an electron as the *effective nuclear charge*. The effective nuclear charge experienced by a particular electron in an atom is the *actual nuclear charge* (Z) minus the *charge shielded by other electrons* (S):

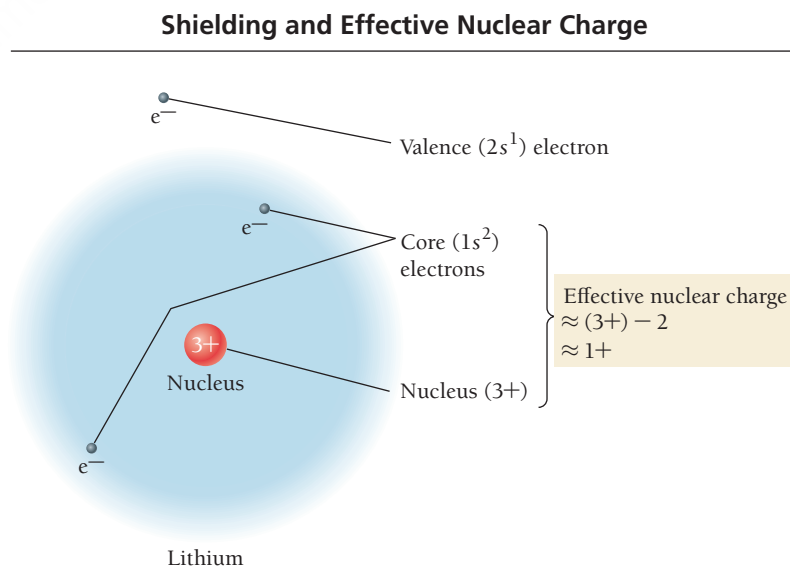
$$Z_{\text{eff}} = Z - S$$

Effective nuclear charge Actual nuclear charge Charge shielded by other electrons

For lithium, we estimate that the two core electrons shield the valence electron from the nuclear charge with high efficiency (S is nearly 2). The effective nuclear charge experienced by lithium's valence electron is therefore slightly greater than $1+$.



KEY CONCEPT VIDEO
Periodic Trends in the Size of
Atoms and Effective Nuclear
Charge



▲ FIGURE 3.15 Shielding and Effective Nuclear Charge The valence electron in lithium experiences the $3+$ charge of the nucleus through the shield of the $2-$ charge of the core electrons. The effective nuclear charge acting on the valence electron is approximately $1+$.

Now consider the valence electrons in beryllium (Be), with atomic number 4. Its electron configuration is:



To estimate the effective nuclear charge experienced by the 2s electrons in beryllium, we must distinguish between two different types of shielding: (1) the shielding of the outermost electrons by the core electrons and (2) the shielding of the outermost electrons by *each other*. The key to understanding the trend in atomic radius is the difference between these two types of shielding:

Core electrons efficiently shield electrons in the outermost principal energy level from nuclear charge, but outermost electrons do not efficiently shield one another from nuclear charge.

For example, the two outermost electrons in beryllium experience the 4+ charge of the nucleus through the shield of the two 1s core electrons without shielding each other from that charge very much. We estimate that the shielding (*S*) experienced by any one of the outermost electrons due to the core electrons is nearly 2, but that the shielding due to the other outermost electron is nearly 0. The effective nuclear charge experienced by beryllium's outermost electrons is therefore slightly greater than 2+.

The effective nuclear charge experienced by *beryllium's* outermost electrons is greater than that experienced by *lithium's* outermost electron. Consequently, beryllium's outermost electrons are held more tightly than lithium's, resulting in a smaller atomic radius for beryllium. The effective nuclear charge experienced by an atom's outermost electrons continues to become more positive as we move to the right across the rest of the second row in the periodic table, resulting in successively smaller atomic radii. The same trend is generally observed in all main-group elements.

Summarizing Atomic Radii for Main-Group Elements

- As we move down a column in the periodic table, the principal quantum number (*n*) of the electrons in the outermost principal energy level increases, resulting in larger orbitals and therefore larger atomic radii.
- As we move to the right across a row in the periodic table, the effective nuclear charge (Z_{eff}) experienced by the electrons in the outermost principal energy level increases, resulting in a stronger attraction between the outermost electrons and the nucleus, and smaller atomic radii.



3.5 Cc

Conceptual
Connection

Effective Nuclear Charge

Which atom's valence electrons experience the greatest effective nuclear charge?

- the valence electrons in Mg
- the valence electrons in Al
- the valence electrons in S

Atomic Radii and the Transition Elements

Notice in Figure 3.14 that as we move down the first two rows of a column within the transition metals, the elements follow the same general trend in atomic radii as the main-group elements (the radii get larger). In contrast, with the exception of the first couple of elements in each transition series, the atomic radii of the transition elements *do not* follow the same trend as the main-group elements as we move to the right across a row. Instead of decreasing in size, the radii of transition elements stay roughly constant across each row. Why? The difference is that, across a row of transition elements, the number of electrons in the

outermost principal energy level (highest n value) is nearly constant (recall from Section 3.3, for example, that the 4s orbital fills before the 3d). As another proton is added to the nucleus of each successive element, another electron is added as well, but the electron goes into an $n_{\text{highest}} - 1$ orbital. The number of outermost electrons stays constant, and the electrons experience a roughly constant effective nuclear charge, keeping the radius approximately constant.

EXAMPLE 3.6

Atomic Size

Interactive
Worked Example
Video 3.6

PEARSON
eText
2.0

On the basis of periodic trends, choose the larger atom in each pair (if possible). Explain your choices.

- (a) N or F (b) C or Ge (c) N or Al (d) Al or Ge

SOLUTION

- (a) N atoms are larger than F atoms because, as you trace the path between N and F on the periodic table, you move to the right within the same period. As you move to the right across a period, the effective nuclear charge experienced by the outermost electrons increases, resulting in a smaller radius.

Lanthanides
Actinides

- (b) Ge atoms are larger than C atoms because, as you trace the path between C and Ge on the periodic table, you move down a column. Atomic size increases as you move down a column because the outermost electrons occupy orbitals with a higher principal quantum number that are therefore larger, resulting in a larger atom.

Lanthanides
Actinides

- (c) Al atoms are larger than N atoms because, as you trace the path between N and Al on the periodic table, you move down a column (atomic size increases) and then to the left across a period (atomic size increases). These effects add together for an overall increase.

Lanthanides
Actinides

- (d) Based on periodic trends alone, you cannot tell which atom is larger, because as you trace the path between Al and Ge you go to the right across a period (atomic size decreases) and then down a column (atomic size increases). These effects tend to counter each other, and it is not easy to tell which will predominate.

Lanthanides
Actinides

FOR PRACTICE 3.6

On the basis of periodic trends, choose the larger atom in each pair (if possible):

- (a) Sn or I (b) Ge or Po (c) Cr or W (d) F or Se

FOR MORE PRACTICE 3.6

Arrange the elements in order of decreasing radius: S, Ca, F, Rb, Si.

3.7 Ions: Electron Configurations, Magnetic Properties, Radii, and Ionization Energy

Recall that ions are atoms (or groups of atoms) that have lost or gained electrons. In this section, we examine periodic trends in ionic electron configurations, magnetic properties, radii, and ionization energies.

Electron Configurations and Magnetic Properties of Ions

As we saw in Section 3.5, we can deduce the electron configuration of a main-group monoatomic ion from the electron configuration of the neutral atom and the charge of the ion. For anions, we *add* the number of electrons indicated by the magnitude of the charge of the anion. For example, the electron configuration of fluorine (F) is $1s^2 2s^2 2p^5$, and that of the fluoride ion (F^-) is $1s^2 2s^2 2p^6$.

We determine the electron configuration of cations by *subtracting* the number of electrons indicated by the magnitude of the charge. For example, the electron configuration of lithium (Li) is $1s^2 2s^1$, and that of the lithium ion (Li^+) is $1s^2 2s^0$ (or simply $1s^2$). For main-group cations, we remove the required number of electrons in the reverse order of filling. However, for transition metal cations, the trend is different. When writing the electron configuration of a transition metal cation, we *remove the electrons in the highest n -value orbitals first, even if this does not correspond to the reverse order of filling*. For example, the electron configuration of vanadium is:



The V^{2+} ion, however, has the following electron configuration:



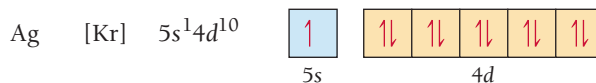
In other words, for transition metal cations, the order in which electrons are removed upon ionization is *not* the reverse of the filling order. During filling, the $4s$ orbital normally fills before the $3d$ orbital. When a fourth-period transition metal ionizes, however, it normally loses its $4s$ electrons before its $3d$ electrons. Why this unexpected behavior?

The full answer to this question is beyond our scope, but the following two factors contribute to this phenomenon:

- As discussed previously, the ns and $(n - 1)d$ orbitals are extremely close in energy and, depending on the exact configuration, can vary in relative energy ordering.
- As the $(n - 1)d$ orbitals begin to fill in the first transition series, the increasing nuclear charge stabilizes the $(n - 1)d$ orbitals relative to the ns orbitals. This happens because the $(n - 1)d$ orbitals are not the outermost (or highest n) orbitals and are therefore not effectively shielded from the increasing nuclear charge by the ns orbitals.

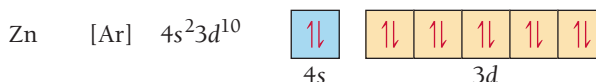
The bottom-line experimental observation is that an $ns^0(n - 1)d^x$ configuration is lower in energy than an $ns^2(n - 1)d^{x-2}$ configuration for transition metal ions. Therefore, we remove the ns electrons before the $(n - 1)d$ electrons when writing electron configurations for transition metal ions.

The magnetic properties of transition metal ions support these assignments. Recall from Section 3.3 that an unpaired electron has spin. This spin generates a tiny magnetic field. Consequently, an atom or ion that contains unpaired electrons is attracted to an external magnetic field, and we say that the atom or ion is **paramagnetic**. For example, consider the electron configuration of silver:

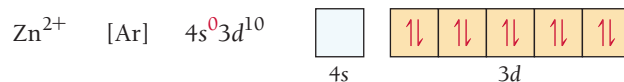


Silver's unpaired $5s$ electron causes silver to be paramagnetic. In fact, an early demonstration of electron spin—called the Stern–Gerlach experiment—involved the interaction of a beam of silver atoms with a magnetic field.

An atom or ion in which all electrons are paired is not attracted to an external magnetic field—it is instead slightly repelled—and we say that the atom or ion is **diamagnetic**. The zinc atom is diamagnetic.



The magnetic properties of the zinc ion provide confirmation that the 4s electrons are indeed lost before 3d electrons in the ionization of zinc. If zinc lost two 3d electrons upon ionization, then the Zn^{2+} would become paramagnetic (because the two electrons would come out of two different filled d orbitals, leaving each of them with one unpaired electron). But the zinc ion, like the zinc atom, is diamagnetic because the 4s electrons are lost instead.



Observations in other transition metals confirm that the ns electrons are lost before the $(n - 1)d$ electrons upon ionization.

EXAMPLE 3.7

Electron Configurations and Magnetic Properties for Ions

Interactive
Worked Example
Video 3.7

PEARSON
eText
2.0

Write the electron configuration and orbital diagram for each ion and determine whether each is diamagnetic or paramagnetic.

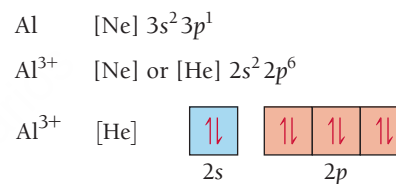
- (a) Al^{3+} (b) S^{2-} (c) Fe^{3+}

SOLUTION

- (a) Al^{3+}

Begin by writing the electron configuration of the neutral atom.

Since this ion has a 3+ charge, remove three electrons to write the electron configuration of the ion. Write the orbital diagram by drawing half-arrows to represent each electron in boxes representing the orbitals. Because there are no unpaired electrons, Al^{3+} is diamagnetic.

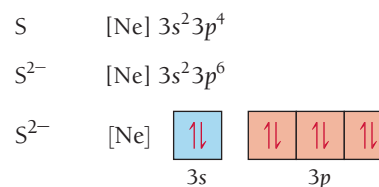


Diamagnetic

- (b) S^{2-}

Begin by writing the electron configuration of the neutral atom.

Since this ion has a 2- charge, add two electrons to write the electron configuration of the ion. Write the orbital diagram by drawing half-arrows to represent each electron in boxes representing the orbitals. Because there are no unpaired electrons, S^{2-} is diamagnetic.

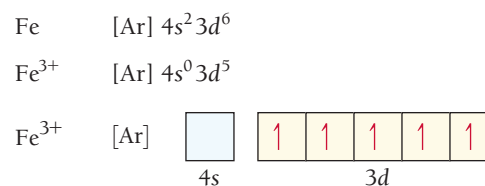


Diamagnetic

- (c) Fe^{3+}

Begin by writing the electron configuration of the neutral atom.

Since this ion has a 3+ charge, remove three electrons to write the electron configuration of the ion. Since it is a transition metal, remove the electrons from the 4s orbital before removing electrons from the 3d orbitals. Write the orbital diagram by drawing half-arrows to represent each electron in boxes representing the orbitals. There are unpaired electrons, so Fe^{3+} is paramagnetic.



Paramagnetic

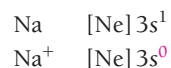
FOR PRACTICE 3.7

Write the electron configuration and orbital diagram for each ion and predict whether each will be paramagnetic or diamagnetic.

- (a) Co^{2+} (b) N^{3-} (c) Ca^{2+}

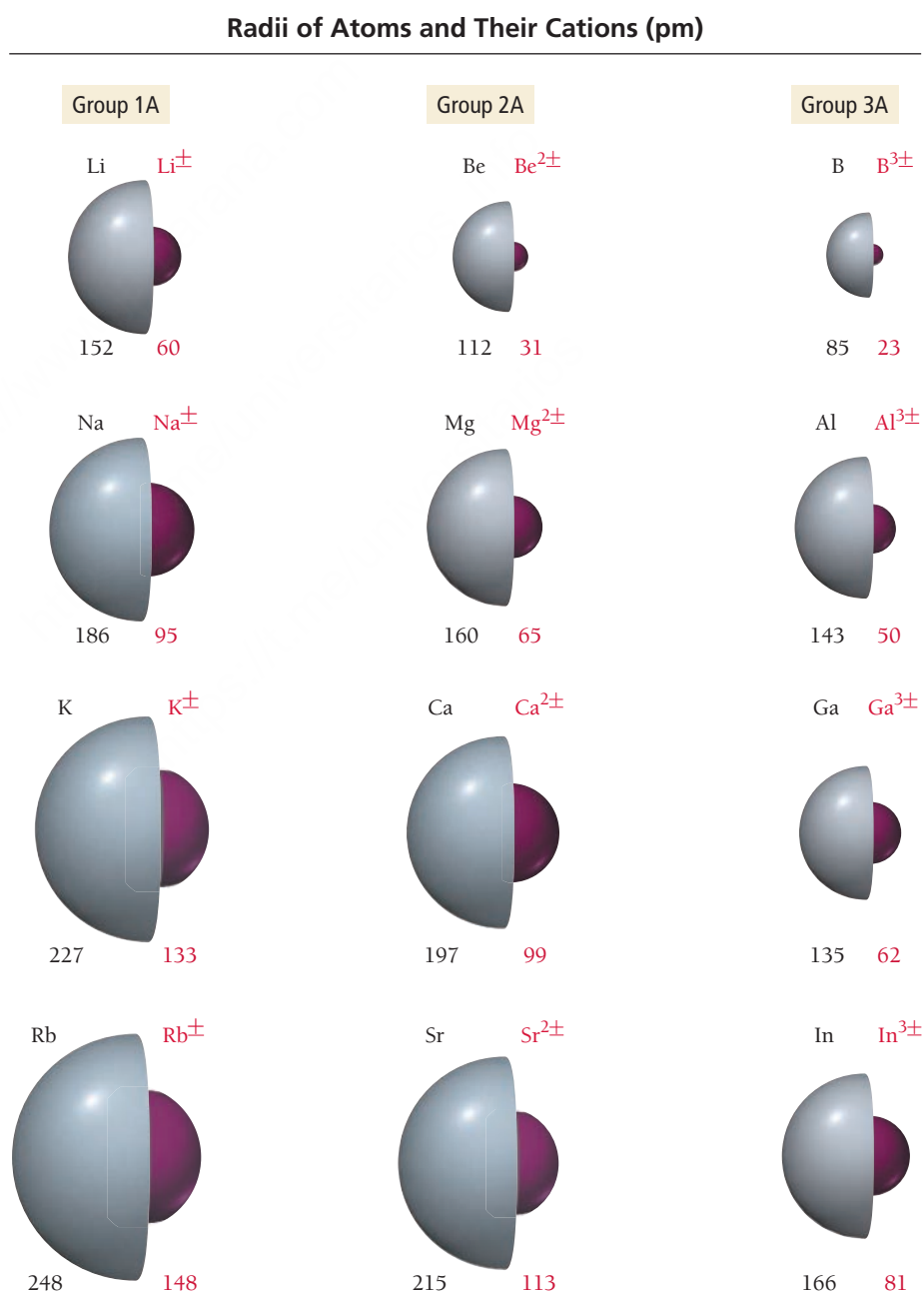
Ionic Radii

What happens to the radius of an atom when it becomes a cation? An anion? Consider, for example, the difference between the Na atom and the Na^+ ion. Their electron configurations are:



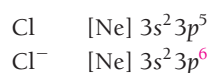
The sodium atom has an outer 3s electron and a neon core. Because the 3s electron is the outermost electron and that electron is shielded from the nuclear charge by the core electrons, it contributes greatly to the size of the sodium atom. The sodium cation, having lost the outermost 3s electron, has only the neon core and carries a charge of 1+. Without the 3s electron, the sodium cation (ionic radius = 95 pm) is much smaller than the sodium atom (covalent radius = 186 pm). The trend is the same with all cations and their atoms, as illustrated in **Figure 3.16** ▼.

Cations are much smaller than their corresponding neutral atoms.



► **FIGURE 3.16** Sizes of Atoms and Their Cations Atomic and ionic radii (pm) for the first three columns of main-group elements.

What about anions? Consider, for example, the difference between Cl and Cl^- . Their electron configurations are:



The chlorine anion has one additional outermost electron but no additional proton to increase the nuclear charge. The extra electron increases the repulsions among the outermost electrons, resulting in a chloride anion that is larger than the chlorine atom. The trend is the same with all anions and their atoms, as shown in **Figure 3.17**.

Anions are much larger than their corresponding neutral atoms.







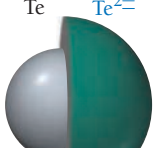
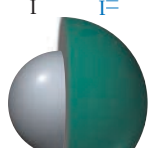
We can observe an interesting trend in ionic size by examining the radii of an *isoelectronic* series of ions—ions with the same number of electrons. Consider the following ions and their radii:

S^{2-} (184 pm)	Cl^- (181 pm)	K^+ (133 pm)	Ca^{2+} (99 pm)
18 electrons	18 electrons	18 electrons	18 electrons
16 protons	17 protons	19 protons	20 protons

All of these ions have 18 electrons in exactly the same orbitals, but the radius of each ion gets successively smaller. Why? The reason is the progressively greater number of protons. The S^{2-} ion has 16 protons, and therefore a charge of 16+ pulling on 18 electrons. The Ca^{2+} ion, however, has 20 protons, and therefore a charge of 20+ pulling on the same 18 electrons. The result is a much smaller radius. In general, the greater the nuclear charge in atoms or ions with the same number of electrons, the smaller the atom or ion.

► **FIGURE 3.17 Sizes of Atoms and Their Anions** Atomic and ionic radii for groups 6A and 7A in the periodic table.

Radii of Atoms and Their Anions (pm)

Group 6A	Group 7A
O O^{2-}  73 140	F F^-  72 136
S S^{2-}  103 184	Cl Cl^-  99 181
Se Se^{2-}  117 198	Br Br^-  114 195
Te Te^{2-}  143 221	I I^-  133 216

EXAMPLE 3.8

Ion Size

Choose the larger atom or ion from each pair.

- (a) S or S^{2-} (b) Ca or Ca^{2+} (c) Br^- or Kr

SOLUTION

- (a) The S^{2-} ion is larger than an S atom because the S^{2-} ion has the same number of protons as S but two more electrons. The additional electron–electron repulsions cause the anion to be larger than the neutral atom.
- (b) A Ca atom is larger than a Ca^{2+} ion because the Ca atom has an argon core and two 4s electrons. Because the 4s electrons are the outermost electrons and they are shielded from the nuclear charge by the core electrons, they contribute greatly to the size of the Ca atom. The Ca^{2+} cation, having lost the outermost 4s electrons, has only the argon core and carries a charge of 2+, which makes it smaller than the Ca atom.
- (c) A Br^- ion is larger than a Kr atom because, although they are isoelectronic, Br^- has one fewer proton than Kr, resulting in a smaller pull on the electrons and therefore a larger radius.

FOR PRACTICE 3.8

Choose the larger atom or ion from each pair.

- (a) K or K^+
 (b) F or F^-
 (c) Ca^{2+} or Cl^-



3.6 Cc

Conceptual
Connection

Ions, Isotopes, and Atomic Size

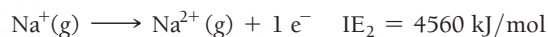
In the previous sections, we have seen how the number of electrons and the number of protons affect the size of an atom or ion. However, we have not considered how the number of neutrons affects the size of an atom. Why not? Would you expect isotopes—for example, C-12 and C-13—to have different atomic radii?

Ionization Energy

The **ionization energy (IE)** of an atom or ion is the energy required to remove an electron from the atom or ion in the gaseous state. Ionization energy is always positive because removing an electron always takes energy. (The process is endothermic, which, as we discussed in Chapter E, absorbs heat and therefore carries a positive sign.) The energy required to remove the first electron is the *first ionization energy* (IE_1). For example, we represent the first ionization of sodium with the equation:



The energy required to remove the second electron is the *second ionization energy* (IE_2), the energy required to remove the third electron is the *third ionization energy* (IE_3), and so on. We represent the second ionization energy of sodium as:

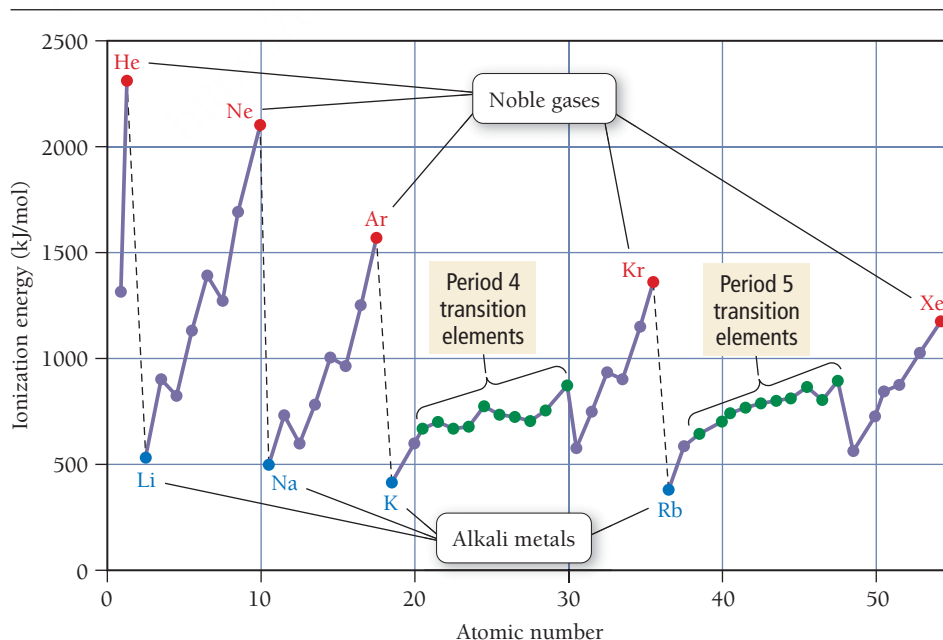


Notice that the second ionization energy is not the energy required to remove *two* electrons from sodium (that quantity is the sum of IE_1 and IE_2), but rather the energy required to remove one electron from Na^+ . We look at trends in IE_1 and IE_2 separately.

Trends in First Ionization Energy

The first ionization energies of the elements through Xe are shown in **Figure 3.18** ▼. Notice the periodic trend in ionization energy, peaking at each noble gas and bottoming at each alkali metal. Based on what we have learned about electron configurations and effective nuclear charge, how can we account for

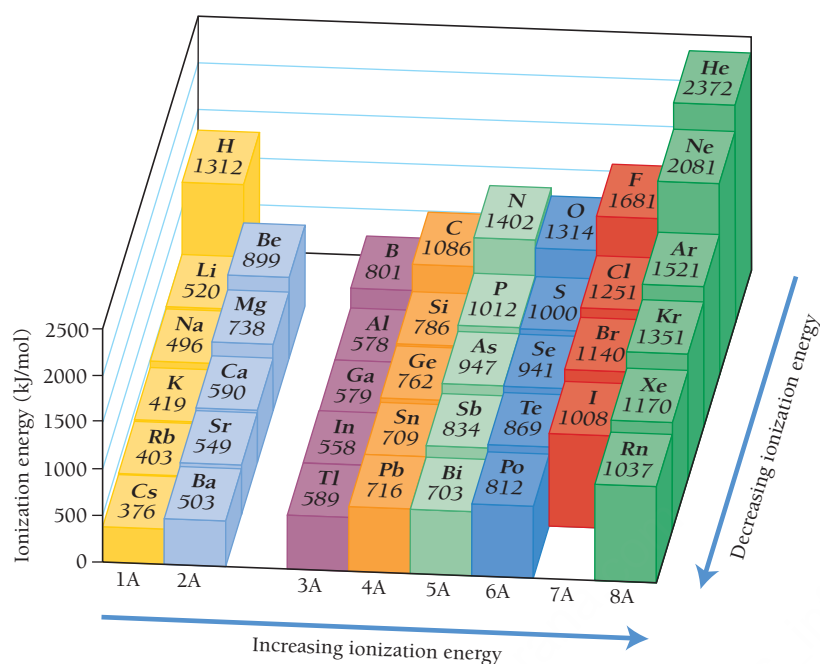
First Ionization Energies



► **FIGURE 3.18** First Ionization Energy versus Atomic Number for the Elements through Xenon

First ionization energy starts at a minimum with each alkali metal and rises to a peak with each noble gas.

Trends in First Ionization Energy



▲ **FIGURE 3.19 Trends in Ionization Energy** Ionization energy increases as we move to the right across a period and decreases as we move down a column in the periodic table.

the observed trend? As we have seen, the principal quantum number, n , increases as we move down a column. For a given sublevel, orbitals with higher principal quantum numbers are larger than orbitals with smaller principal quantum numbers. (For example, a $4s$ orbital is larger than a $3s$ orbital.) Consequently, electrons in the outermost principal level are farther away from the positively charged nucleus—and are therefore held less tightly—as we move down a column. This results in lower ionization energies as we move down a column, as shown in **Figure 3.19** ▲.

What about the trend as we move to the right across a row? For example, does it take more energy to remove an electron from Na or from Cl, two elements on either end of the third row in the periodic table? We know that Na has an outer electron configuration of $3s^1$ and Cl has an outer electron configuration of $3s^2 3p^5$. As discussed previously, the outermost electrons in chlorine experience a higher effective nuclear charge than the outermost electrons in sodium (which is why chlorine has a smaller atomic radius than sodium). Consequently, we would expect chlorine to have a higher first ionization energy than sodium, which is indeed the case. We can make a similar argument for the other main-group elements: First ionization energy generally increases as we move to the right across a row in the periodic table, as shown in Figure 3.19.

Summarizing First Ionization Energy for Main-Group Elements

- First ionization energy generally *decreases* as we move down a column (or family) in the periodic table because electrons in the outermost principal level are increasingly farther away from the positively charged nucleus and are therefore held less tightly.
- First ionization energy generally *increases* as we move to the right across a row (or period) in the periodic table because electrons in the outermost principal energy level generally experience a greater effective nuclear charge (Z_{eff}).

EXAMPLE 3.9**First Ionization Energy**Interactive
Worked Example
Video 3.9PEARSON
eText
2.0

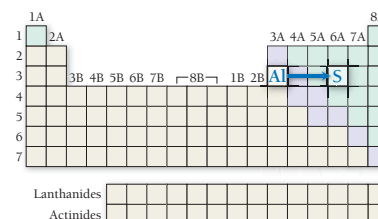
On the basis of periodic trends, determine which element in each pair has the higher first ionization energy (if possible).

- (a) Al or S (b) As or Sb (c) N or Si (d) O or Cl

SOLUTION

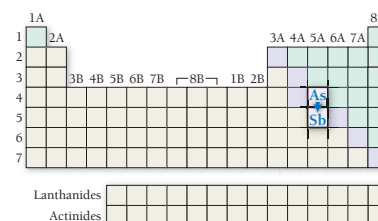
- (a) Al or S

S has a higher first ionization energy than Al because, as you trace the path between Al and S on the periodic table, you move to the right within the same row. First ionization energy increases as you go to the right due to increasing effective nuclear charge.



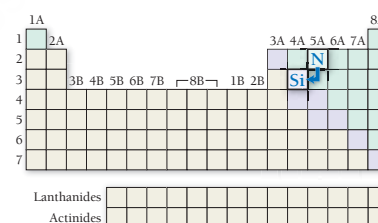
- (b) As or Sb

As has a higher first ionization energy than Sb because, as you trace the path between As and Sb on the periodic table, you move down a column. First ionization energy decreases as you go down a column as a result of the increasing size of orbitals with increasing n .



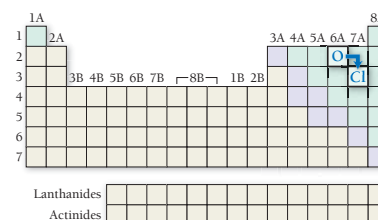
- (c) N or Si

N has a higher first ionization energy than Si because, as you trace the path between N and Si on the periodic table, you move down a column (first ionization energy decreases due to increasing size of outermost orbitals) and then to the left across a row (first ionization energy decreases due to decreasing effective nuclear charge). These effects sum together for an overall decrease.



- (d) O or Cl

Based on periodic trends alone, it is impossible to tell which has a higher first ionization energy because, as you trace the path between O and Cl, you go to the right across a row (first ionization energy increases) and then down a column (first ionization energy decreases). These effects tend to counter each other, and it is not obvious which will dominate.

**FOR PRACTICE 3.9**

On the basis of periodic trends, determine the element in each pair with the higher first ionization energy (if possible).

- (a) Sn or I (b) Ca or Sr (c) C or P (d) F or S

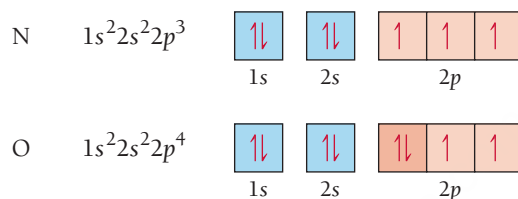
FOR MORE PRACTICE 3.9

Arrange the following elements in order of decreasing first ionization energy: S, Ca, F, Rb, Si.

Exceptions to Trends in First Ionization Energy

If we carefully examine Figure 3.19, we can see some exceptions to the trends in first ionization energies. For example, boron has a smaller ionization energy than beryllium, even though it lies to the right of beryllium in the same row. This exception is caused by the change in going from the *s* block to the *p* block. Recall from Section 3.3 that the *2p* orbital penetrates into the nuclear region *less than* the *2s* orbital. Consequently, the *1s* electrons shield the electron in the *2p* orbital from nuclear charge more than they shield the electrons in the *2s* orbital. The result is that the *2p* orbitals are higher in energy, and therefore the electron is easier to remove (it has a lower first ionization energy). Similar exceptions occur for aluminum and gallium, both directly below boron in group 3A.

Another exception occurs between nitrogen and oxygen. Although oxygen is to the right of nitrogen in the same row, it has a lower first ionization energy. This exception is caused by the repulsion between electrons when they occupy the same orbital. Examine the electron configurations and orbital diagrams of nitrogen and oxygen shown here:

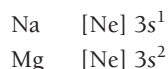


Nitrogen has three electrons in three *p* orbitals, while oxygen has four. In nitrogen, the *2p* orbitals are half-filled (which makes the configuration particularly stable). Oxygen's fourth electron must pair with another electron, making it easier to remove (and less stable). Exceptions for similar reasons occur for S and Se, directly below oxygen in group 6A.

Trends in Second and Successive Ionization Energies

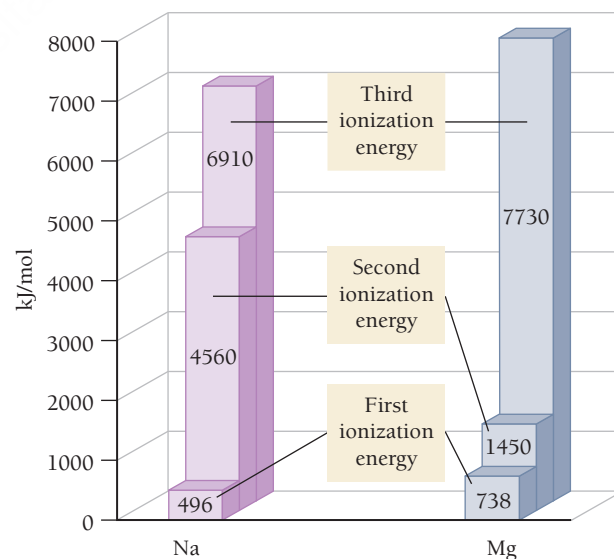
Notice the trends in the first, second, and third ionization energies of sodium (group 1A) and magnesium (group 2A), as shown in the margin. For sodium, there is a huge jump between the first and second ionization energies. For magnesium, the ionization energy roughly doubles from the first to the second, but then a huge jump occurs between the second and third ionization energies. What is the reason for these jumps?

We can understand these trends by examining the electron configurations of sodium and magnesium:



The first ionization of sodium involves removing the valence electron in the *3s* orbital. Recall that these valence electrons are held more loosely than the core electrons and that the resulting ion has a noble gas configuration, which is particularly stable. Consequently, the first ionization energy is fairly low. The second ionization of sodium, however, involves removing a core electron from an ion with a noble gas configuration. This requires a tremendous amount of energy, making the value of IE_2 very high.

As with sodium, the first ionization of magnesium involves removing a valence electron in the *3s* orbital. This requires a bit more energy than the corresponding ionization of sodium because of the trends in Z_{eff} that we discussed earlier (Z_{eff} increases as we move to the right across a row). The second ionization of magnesium also involves removing an outer electron in the *3s* orbital, but this time from an ion with a $1+$ charge (instead of from a neutral atom). This requires roughly twice the energy as removing the electron from the neutral atom. The third ionization of magnesium is analogous to the second ionization of sodium—it requires removing a core electron from an ion with a noble gas configuration. This requires a tremendous amount of energy, making IE_3 very high.



As shown in Table 3.1, similar trends exist for the successive ionization energies of many elements. Ionization energies increase fairly uniformly with each successive removal of an outermost electron but take a large jump with the removal of the first core electron.

TABLE 3.1 Successive Values of Ionization Energies for the Elements Sodium through Argon (kJ/mol)

Element	IE ₁	IE ₂	IE ₃	IE ₄	IE ₅	IE ₆	IE ₇
Na	496	4560					
Mg	738	1450	7730				
Al	578	1820	2750	11,600			
Si	786	1580	3230	4360	16,100		
P	1012	1900	2910	4960	6270	22,200	
S	1000	2250	3360	4560	7010	8500	27,100
Cl	1251	2300	3820	5160	6540	9460	11,000
Ar	1521	2670	3930	5770	7240	8780	12,000



Conceptual Connection

Ionization Energies and Chemical Bonding

Based on what you just learned about ionization energies, explain why valence electrons are more important than core electrons in determining the reactivity and bonding in atoms.

3.8 Electron Affinities and Metallic Character

Electron affinity and metallic character also exhibit periodic trends. Electron affinity is a measure of how easily an atom accepts an additional electron and is crucial to chemical bonding because bonding involves the transfer or sharing of electrons. Metallic character is important because of the high proportion of metals in the periodic table and the large role they play in our lives. Of the 118 known elements, 92 are metals. We examine each of these periodic properties individually in this section.

Electron Affinity

The **electron affinity (EA)** of an atom or ion is the energy change associated with the gaining of an electron by the atom in the gaseous state. Electron affinity is usually—though not always—negative because an atom or ion usually releases energy when it gains an electron. (The process is exothermic, which, as discussed in Chapter E, gives off heat and therefore carries a negative sign.) In other words, the coulombic attraction between the nucleus of an atom and the incoming electron usually results in the release of energy as the electron is gained. For example, we can represent the electron affinity of chlorine with the equation:

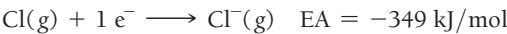


Figure 3.20 ◀ displays the electron affinities for a number of main-group elements. As we can see from this figure, the trends in electron affinity are not as regular as trends in other properties we have examined. For instance, we might expect electron affinities to become relatively more positive (so that the addition of an electron is less exothermic) as we move down a column because the electron is entering orbitals with successively higher principal quantum numbers and will therefore be farther from the nucleus. This trend applies to the group 1A metals but does not hold for the other columns in the periodic table.

Electron Affinities (kJ/mol)

1A							8A
H -73							He >0
Li -60	2A Be >0	3A B -27	4A C -122	5A N >0	6A O -141	7A F -328	Ne >0
Na -53	Mg >0	Al -43	Si -134	P -72	S -200	Cl -349	Ar >0
K -48	Ca -2	Ga -30	Ge -119	As -78	Se -195	Br -325	Kr >0
Rb -47	Sr -5	In -30	Sn -107	Sb -103	Te -190	I -295	Xe >0

▲ FIGURE 3.20 Electron Affinities of Selected Main-Group Elements

A more regular trend in electron affinity, however, occurs as we move to the right across a row. Based on the periodic properties we have learned so far, would you expect more energy to be released when an electron is gained by Na or Cl? We know that Na has an outer electron configuration of $3s^1$ and Cl has an outer electron configuration of $3s^2 3p^5$. Because adding an electron to chlorine gives it a noble gas configuration and adding an electron to sodium does not, and because the outermost electrons in chlorine experience a higher Z_{eff} than the outermost electrons in sodium, we would expect chlorine to have a more negative electron affinity—the process should be more exothermic for chlorine. This is in fact the case. For main-group elements, electron affinity generally becomes more negative (more exothermic) as we move to the right across a row in the periodic table. The halogens (group 7A) therefore have the most negative electron affinities. But exceptions do occur. For example, notice that nitrogen and the other group 5A elements do not follow the general trend. These elements have $ns^2 np^3$ outer electron configurations. When an electron is added to this configuration, it must pair with another electron in an already occupied p orbital. The repulsion between two electrons occupying the same orbital causes the electron affinity to be more positive than that for elements in the previous column.

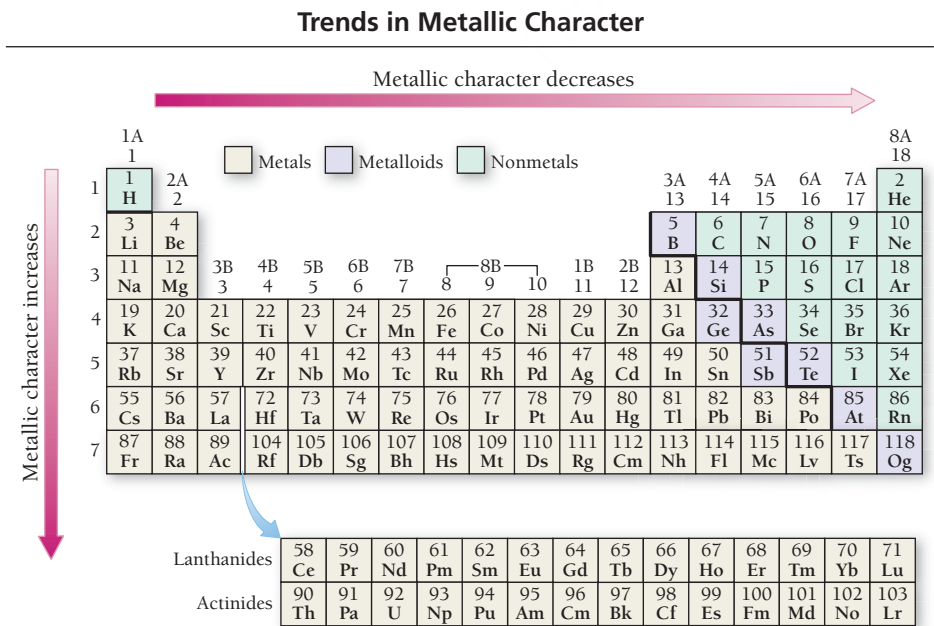
Summarizing Electron Affinity for Main-Group Elements

- Most groups (columns) of the periodic table do not exhibit any definite trend in electron affinity. Among the group 1A metals, however, electron affinity becomes more positive as we move down the column (adding an electron becomes less exothermic).
- Electron affinity generally becomes more negative (adding an electron becomes more exothermic) as we move to the right across a period (row) in the periodic table.

Metallic Character

As we discussed in Section 3.5, metals are good conductors of heat and electricity; they can be pounded into flat sheets (malleability); they can be drawn into wires (ductility); they are often shiny; and they tend to lose electrons in chemical reactions. Nonmetals, in contrast, have more varied physical properties; some are solids at room temperature, others are gases, but in general nonmetals are typically poor conductors of heat and electricity, and they all tend to gain electrons in chemical reactions. As we move to the right across a row in the periodic table, ionization energy increases and electron affinity becomes more negative; therefore, elements on the left side of the periodic table are more likely to lose electrons than elements on the right side of the periodic table (which are more likely to gain them). The other properties associated with metals follow the same general trend (even though we do not quantify them here). Consequently, as shown in **Figure 3.21** ▼:

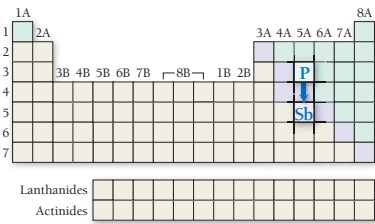
As we move to the right across a row (or period) in the periodic table, metallic character decreases.



◀ **FIGURE 3.21 Trends in Metallic Character I** Metallic character decreases as we move to the right across a period and increases as we move down a column in the periodic table.

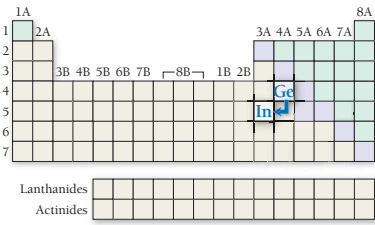
(b) P or Sb

Sb is more metallic than P because, as you trace the path between P and Sb on the periodic table, you move down a column. Metallic character increases as you move down a column.



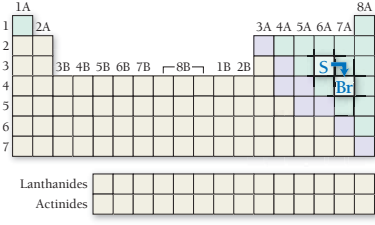
(c) Ge or In

In is more metallic than Ge because, as you trace the path between Ge and In on the periodic table, you move down a column (metallic character increases) and then to the left across a period (metallic character increases). These effects add together for an overall increase.



(d) S or Br

Based on periodic trends alone, we cannot tell which is more metallic because as you trace the path between S and Br, you go to the right across a period (metallic character decreases) and then down a column (metallic character increases). These effects tend to counter each other, and it is not obvious which will predominate.



FOR PRACTICE 3.10

On the basis of periodic trends, choose the more metallic element from each pair (if possible).

(a) Ge or Sn (b) Ga or Sn (c) P or Bi (d) B or N

FOR MORE PRACTICE 3.10

Arrange the following elements in order of increasing metallic character: Si, Cl, Na, Rb.

Periodic Trends

Use the trends in ionization energy and electron affinity to explain why sodium chloride has the formula NaCl and not Na₂Cl or NaCl₂.

3.8

Cc

Conceptual Connection














PEARSON

eText 2.0

3.9 Periodic Trends Summary

In this chapter, we have examined various trends in properties that we can understand in terms of electron configurations. Since electron configurations are just a way of specifying electronic structure, the trends in this chapter are a good example of the overall theme of this book: *structure determines properties*. In other words, we have just seen how electronic structure determines the size, ionization energy, electron affinity, and metallic character of atoms. We summarize these four important properties and their periodic trends in Table 3.2.

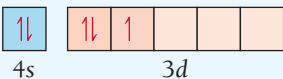
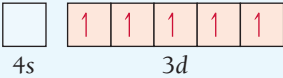
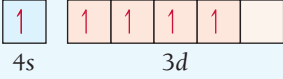

TABLE 3.2 Summary of Periodic Properties

Property	Trend Moving Down a Column	Reason for Trend	Trend Moving Across a Row	Reason for Trend
Atomic Radii	Increasing 	Size of outermost occupied orbital increases 	Decreasing 	Effective nuclear charge increases 
First Ionization Energy	Decreasing 	Outermost electrons are further away from nucleus (and therefore easier to remove)	Increasing 	Effective nuclear charge increases 
Electron Affinity	No definite trend		Decreasing (more negative) 	Effective nuclear charge increases 
Metallic Character	Increasing 	Ionization energy decreases 	Decreasing 	Ionization energy increases 

SELF-ASSESSMENT



QUIZ

- According to Coulomb's law, if the separation between two particles of the same charge is doubled, the potential energy of the two particles _____.
 - is twice as high as it was before the distance separation
 - is one-half as high as it was before the separation
 - does not change
 - is one-fourth as high as it was before the separation
- Which electron in S is most shielded from nuclear charge?
 - an electron in the 1s orbital
 - an electron in a 2p orbital
 - an electron in a 3p orbital
 - none of the above (All of these electrons are equally shielded from nuclear charge.)
- Choose the correct electron configuration for Se.
 - $1s^2 2s^2 2p^6 3s^2 3p^4$
 - $1s^2 2s^2 2p^6 3s^2 3p^6 4s^2 3d^{10} 4p^4$
 - $1s^2 2s^2 2p^6 3s^2 3p^6 4s^2 4p^4$
 - $1s^2 2s^2 2p^6 3s^2 3p^6 4s^2 3d^4$
- Choose the correct orbital diagram for vanadium.
 - [Ar] 
 - [Ar] 
 - [Ar] 
 - [Ar] 
- Which set of four quantum numbers corresponds to an electron in a 4p orbital?
 - $n = 4, l = 1, m_l = 0, m_s = \frac{1}{2}$
 - $n = 4, l = 3, m_l = 3, m_s = -\frac{1}{2}$
 - $n = 4, l = 2, m_l = 0, m_s = \frac{1}{2}$
 - $n = 4, l = 4, m_l = 3, m_s = -\frac{1}{2}$
- Which element has the smallest atomic radius?
 - C
 - Si
 - Be
 - F
- Which statement is true about electron shielding of nuclear charge?
 - Outermost electrons efficiently shield one another from nuclear charge.
 - Core electrons efficiently shield one another from nuclear charge.
 - Outermost electrons efficiently shield core electrons from nuclear charge.
 - Core electrons efficiently shield outermost electrons from nuclear charge.
- Which statement is true about effective nuclear charge?
 - Effective nuclear charge *decreases* as we move to the right across a row in the periodic table.
 - Effective nuclear charge *increases* as we move to the right across a row in the periodic table.
 - Effective nuclear charge remains relatively constant as we move to the right across a row in the periodic table.
 - Effective nuclear charge *increases*, then *decreases*, at regular intervals as we move to the right across a row in the periodic table.
- What is the electron configuration for Fe^{2+} ?
 - [Ar] $4s^2 3d^6$
 - [Ar] $4s^2 3d^4$
 - [Ar] $4s^0 3d^6$
 - [Ar] $4s^2 3d^8$

10. Which species is diamagnetic?
 - a) Cr^{2+}
 - b) Zn
 - c) Mn
 - d) C
11. Arrange these atoms and ions in order of increasing radius: Cs^+ , Ba^{2+} , I^- .
 - a) $\text{I}^- < \text{Ba}^{2+} < \text{Cs}^+$
 - b) $\text{Cs}^+ < \text{Ba}^{2+} < \text{I}^-$
 - c) $\text{Ba}^{2+} < \text{Cs}^+ < \text{I}^-$
 - d) $\text{I}^- < \text{Cs}^+ < \text{Ba}^{2+}$
12. Arrange these elements in order of increasing first ionization energy: Cl , Sn , Si .
 - a) $\text{Cl} < \text{Si} < \text{Sn}$
 - b) $\text{Sn} < \text{Si} < \text{Cl}$
 - c) $\text{Si} < \text{Cl} < \text{Sn}$
 - d) $\text{Sn} < \text{Cl} < \text{Si}$
13. The ionization energies of an unknown third period element are shown here. Identify the element. $\text{IE}_1 = 786 \text{ kJ/mol}$; $\text{IE}_2 = 1580 \text{ kJ/mol}$; $\text{IE}_3 = 3230 \text{ kJ/mol}$; $\text{IE}_4 = 4360 \text{ kJ/mol}$; $\text{IE}_5 = 16,100 \text{ kJ/mol}$;
 - a) Mg
 - b) Al
 - c) Si
 - d) P
14. Identify the correct trends in metallic character.
 - a) Metallic character *increases* as we move to the right across a row in the periodic table and *increases* as we move down a column.
 - b) Metallic character *decreases* as we move to the right across a row in the periodic table and *increases* as we move down a column.
 - c) Metallic character *decreases* as we move to the right across a row in the periodic table and *decreases* as we move down a column.
 - d) Metallic character *increases* as we move to the right across a row in the periodic table and *decreases* as we move down a column.
15. For which element is the gaining of an electron most exothermic?
 - a) Li
 - b) N
 - c) F
 - d) B
16. What is the charge of the ion most commonly formed by S ?
 - a) $2+$
 - b) $+$
 - c) $-$
 - d) $2-$

Answers: 1. b; 2. c; 3. b; 4. d; 5. a; 6. d; 7. d; 8. b; 9. c; 10. b; 11. c; 12. b; 13. c; 14. b; 15. c; 16. d

CHAPTER SUMMARY

3

MasteringChemistry™ provides end-of-chapter exercises, feedback-enriched tutorial problems, animations, and interactive activities to encourage problem solving practice and deeper understanding of key concepts and topics.

REVIEW

KEY LEARNING OUTCOMES

CHAPTER OBJECTIVES	ASSESSMENT
Write Electron Configurations (3.3)	• Example 3.1 For Practice 3.1 Exercises 45, 46, 49, 50
Write Orbital Diagrams (3.3)	• Example 3.2 For Practice 3.2 Exercises 47, 48
Differentiate Between Valence Electrons and Core Electrons (3.4)	• Example 3.3 For Practice 3.3 Exercises 55–60
Write Electron Configurations from the Periodic Table (3.4)	• Example 3.4 For Practice 3.4 For More Practice 3.4 Exercises 49–52
Predict the Charge of Ions (3.5)	• Example 3.5 For Practice 3.5 Exercises 63, 64
Use Periodic Trends to Predict Atomic Size (3.6)	• Example 3.6 For Practice 3.6 For More Practice 3.6 Exercises 71–74
Write Electron Configurations for Ions (3.7)	• Example 3.7 For Practice 3.7 Exercises 63, 64, 75–78
Apply Periodic Trends to Predict Ion Size (3.7)	• Example 3.8 For Practice 3.8 For More Practice 3.8 Exercises 79–82
Apply Periodic Trends to Predict Relative Ionization Energies (3.7)	• Example 3.9 For Practice 3.9 For More Practice 3.9 Exercises 83–88
Predict Metallic Character Based on Periodic Trends (3.8)	• Example 3.10 For Practice 3.10 For More Practice 3.10 Exercises 89–94

KEY TERMS

Section 3.1

periodic property (114)

Section 3.2

periodic law (115)

main-group element (116)

transition element (or transition metal) (116)

family (or group) (116)

Section 3.3

electron configuration (117)

ground state (117)

orbital diagram (117)

Pauli exclusion principle (117)

degenerate (118)

Coulomb's law (118)

shielding (119)

effective nuclear charge (Z_{eff}) (119)

penetration (119)

aufbau principle (121)

Hund's rule (121)

Section 3.4

valence electrons (124)

core electrons (124)

Section 3.5

noble gas (128)

metal (128)

nonmetal (129)

metalloid (129)

semiconductor (129)

alkali metal (130)

alkaline earth metal (130)

halogen (130)

Section 3.6

van der Waals radius (nonbonding atomic radius) (131)

covalent radius (bonding atomic radius) (131)

atomic radius (131)

Section 3.7

paramagnetic (136)

diamagnetic (136)

ionization energy (IE) (140)

Section 3.8

electron affinity (EA) (144)

KEY CONCEPTS

Periodic Properties and the Periodic Table (3.1, 3.2)

- The periodic table was developed primarily by Dmitri Mendeleev in the nineteenth century. Mendeleev arranged the elements in a table so that their atomic masses increased from left to right in a row and elements with similar properties fell in the same columns.
- Periodic properties are predictable based on an element's position within the periodic table. Periodic properties include atomic and ionic radius, ionization energy, electron affinity, density, and metallic character.
- Quantum mechanics explains the periodic table by showing how electrons fill the quantum-mechanical orbitals within the atoms that compose the elements.

Electron Configurations (3.3)

- An electron configuration for an atom shows which quantum-mechanical orbitals the atom's electrons occupy. For example, the electron configuration of helium ($1s^2$) indicates that helium's two electrons exist within the $1s$ orbital.
- The order of filling quantum-mechanical orbitals in multi-electron atoms is: $1s$ $2s$ $2p$ $3s$ $3p$ $4s$ $3d$ $4p$ $5s$ $4d$ $5p$ $6s$.
- According to the Pauli exclusion principle, each orbital can hold a maximum of two electrons (with opposing spins).
- According to Hund's rule, orbitals of the same energy first fill singly with electrons with parallel spins before pairing.

Electron Configurations and the Periodic Table (3.4)

- An atom's outermost electrons (valence electrons) are most important in determining the atom's properties.
- Because quantum-mechanical orbitals fill sequentially with increasing atomic number, we can predict the electron configuration of an element from its position in the periodic table.

Electron Configurations and the Properties of Elements (3.5)

- The most stable (or chemically unreactive) elements in the periodic table are the noble gases. These elements have completely full principal energy levels, which have particularly low potential energy compared to other possible electron configurations.
- Elements on the left side and in the center of the periodic table are metals and tend to lose electrons when they undergo chemical changes.

- Elements on the upper right side of the periodic table are nonmetals and tend to gain electrons when they undergo chemical changes.
- Elements with one or two valence electrons are among the most active metals, readily losing their valence electrons to attain noble gas configurations.
- Elements with six or seven valence electrons are among the most active nonmetals, readily gaining enough electrons to attain a noble gas configuration.
- Many main-group elements form ions with noble gas electron configurations.

Effective Nuclear Charge and Periodic Trends in Atomic Size (3.6)

- The size of an atom is largely determined by its outermost electrons. As we move down a column in the periodic table, the principal quantum number (n) of the outermost electrons increases, resulting in successively larger orbitals and therefore larger atomic radii.
- As we move across a row in the periodic table, atomic radii decrease because the effective nuclear charge—the net or average charge experienced by the atom's outermost electrons—increases.
- The atomic radii of the transition elements stay roughly constant as we move across each row because electrons are added to the $n_{\text{highest}} - 1$ orbitals, while the number of highest n electrons stays roughly constant.

Ion Properties (3.7)

- We determine the electron configuration of an ion by adding or subtracting the corresponding number of electrons to the electron configuration of the neutral atom.
- For main-group ions, the order of removing electrons is the same as the order in which they are added in building up the electron configuration.
- For transition metal atoms, ns electrons are removed before $(n - 1)d$ electrons.
- The radius of a cation is much *smaller* than that of the corresponding atom, and the radius of an anion is much *larger* than that of the corresponding atom.
- The first ionization energy—the energy required to remove the first electron from an atom in the gaseous state—generally decreases as we move down a column in the periodic table and increases when we move to the right across a row.

- Successive ionization energies increase smoothly from one valence electron to the next, but the ionization energy increases dramatically for the first core electron.

Electron Affinities and Metallic Character (3.8)

- Electron affinity—the energy associated with an element in its gaseous state gaining an electron—does not show a general

trend as we move down a column in the periodic table, but it generally becomes more negative (more exothermic) to the right across a row.

- Metallic character—the tendency to lose electrons in a chemical reaction—generally increases down a column in the periodic table and decreases to the right across a row.

KEY EQUATIONS AND RELATIONSHIPS

Order of Filling Quantum-Mechanical Orbitals (3.3)

$$1s\ 2s\ 2p\ 3s\ 3p\ 4s\ 3d\ 4p\ 5s\ 4d\ 5p\ 6s$$

EXERCISES

REVIEW QUESTIONS

1. What are periodic properties?
2. Use aluminum as an example to explain how density is a periodic property.
3. Explain the contributions of Döbereiner and Newlands to the organization of elements according to their properties.
4. Who is credited with arranging the periodic table? How are elements arranged in this table?
5. Explain the contributions of Meyer and Moseley to the periodic table.
6. The periodic table is a result of the periodic law. What observations led to the periodic law? What theory explains the underlying reasons for the periodic law?
7. What is an electron configuration? Provide an example.
8. What is Coulomb's law? Explain how the potential energy of two charged particles depends on the distance between the charged particles and on the magnitude and sign of their charges.
9. What is shielding? In an atom, which electrons tend to do the most shielding (core electrons or valence electrons)?
10. What is penetration? How does the penetration of an orbital into the region occupied by core electrons affect the energy of an electron in that orbital?
11. Why are the sublevels within a principal level split into different energies for multi-electron atoms but not for the hydrogen atom?
12. What is an orbital diagram? Provide an example.
13. Why is electron spin important when writing electron configurations? Explain in terms of the Pauli exclusion principle.
14. What are degenerate orbitals? According to Hund's rule, how are degenerate orbitals occupied?
15. List all orbitals from 1s through 5s according to increasing energy for multi-electron atoms.
16. What are valence electrons? Why are they important?
17. Copy this blank periodic table onto a sheet of paper and label each of the blocks within the table: *s* block, *p* block, *d* block, and *f* block.

	1A																		8A
	1	2A																	18
1		2																	
2			3B	4B	5B	6B	7B	8	9	10	11	12							
3			3	4	5	6	7	8	9	10	11	12							
4																			
5																			
6																			
7																			
Lanthanides																			
Actinides																			

18. Explain why the *s* block in the periodic table has only two columns while the *p* block has six.
19. Explain why the rows in the periodic table become progressively longer as we move down the table. For example, the first row contains two elements, the second and third rows each contain eight elements, and the fourth and fifth rows each contain 18 elements.
20. Explain the relationship between a main-group element's lettered group number (the number of the element's column) and its valence electrons.
21. Explain the relationship between an element's row number in the periodic table and the highest principal quantum number in the element's electron configuration. How does this relationship differ for main-group elements, transition elements, and inner transition elements?
22. Which of the transition elements in the first transition series have anomalous electron configurations?
23. Explain how to write the electron configuration for an element based on its position in the periodic table.
24. Explain the relationship between the properties of an element and the number of valence electrons that it contains.
25. List the number of valence electrons for each family in the periodic table, and explain the relationship between the number of valence electrons and the resulting chemistry of the elements in the family.
 - a. alkali metals
 - b. alkaline earth metals
 - c. halogens
 - d. oxygen family

26. Define atomic radius. For main-group elements, describe the observed trends in atomic radius as we:
 - a. move across a period in the periodic table
 - b. move down a column in the periodic table
27. What is effective nuclear charge? What is shielding?
28. When an alkali metal forms an ion, what is the charge of the ion? What is the charge of an alkaline earth metal ion?
29. When a halogen forms an ion, what is the charge of the ion? When the nonmetals in the oxygen family form ions, what is the charge of the ions? What is the charge of the ions formed by N and Al?
30. Use the concepts of effective nuclear charge, shielding, and n value of the valence orbital to explain the trend in atomic radius as we move across a period in the periodic table.
31. For transition elements, describe the trends in atomic radius as we:
 - a. move across a period in the periodic table
 - b. move down a column in the periodic table
 Explain the reasons for the trends described in parts a and b.
32. How is the electron configuration of an anion different from that of the corresponding neutral atom? How is the electron configuration of a cation different?
33. Explain how to write an electron configuration for a transition metal cation. Is the order of electron removal upon ionization simply the reverse of electron addition upon filling? Why or why not?
34. Describe the relationship between:
 - a. the radius of a cation and the radius of the atom from which it is formed
 - b. the radius of an anion and the radius of the atom from which it is formed
35. What is ionization energy? What is the difference between first ionization energy and second ionization energy?
36. What is the general trend in first ionization energy as we move down a column in the periodic table? As we move across a row?
37. What are the exceptions to the periodic trends in first ionization energy? Why do they occur?
38. Examination of the first few successive ionization energies for a given element usually reveals a large jump between two ionization energies. For example, the successive ionization energies of magnesium show a large jump between IE_2 and IE_3 . The successive ionization energies of aluminum show a large jump between IE_3 and IE_4 . Explain why these jumps occur and how we might predict them.
39. What is electron affinity? What are the observed periodic trends in electron affinity?
40. What is metallic character? What are the observed periodic trends in metallic character?

PROBLEMS BY TOPIC

Note: Answers to all odd-numbered Problems, numbered in blue, can be found in Appendix III. Exercises in the Problems by Topic section are paired, with each odd-numbered problem followed by a similar even-numbered problem. Exercises in the Cumulative Problems section are also paired but more loosely. Because of their nature, Challenge Problems and Conceptual Problems are unpaired.

The Periodic Table

41. Write the name of each element and classify it as a metal, nonmetal, or metalloid.
 - a. K
 - b. Ba
 - c. I
 - d. O
 - e. Sb
42. Write the symbol for each element and classify it as a metal, nonmetal, or metalloid.
 - a. gold
 - b. fluorine
 - c. sodium
 - d. tin
 - e. argon
43. Determine whether each element is a main-group element.
 - a. tellurium
 - b. potassium
 - c. vanadium
 - d. manganese
44. Determine whether each element is a transition element.
 - a. Cr
 - b. Br
 - c. Mo
 - d. Cs

Electron Configurations

45. Write the full electron configuration for each element.
 - a. Si
 - b. O
 - c. K
 - d. Ne
46. Write the full electron configuration for each element.
 - a. C
 - b. P
 - c. Ar
 - d. Na
47. Write the full orbital diagram for each element.
 - a. N
 - b. F
 - c. Mg
 - d. Al

48. Write the full orbital diagram for each element.
 - a. S
 - b. Ca
 - c. Ne
 - d. He
49. Use the periodic table to write the electron configuration for each element. Represent core electrons with the symbol of the previous noble gas in brackets.
 - a. P
 - b. Ge
 - c. Zr
 - d. I
50. Use the periodic table to determine the element corresponding to each electron configuration.
 - a. $[\text{Ar}] 4s^2 3d^{10} 4p^6$
 - b. $[\text{Ar}] 4s^2 3d^2$
 - c. $[\text{Kr}] 5s^2 4d^{10} 5p^2$
 - d. $[\text{Kr}] 5s^2$
51. Use the periodic table to determine each quantity.
 - a. the number of 2s electrons in Li
 - b. the number of 3d electrons in Cu
 - c. the number of 4p electrons in Br
 - d. the number of 4d electrons in Zr
52. Use the periodic table to determine each quantity.
 - a. the number of 3s electrons in Mg
 - b. the number of 3d electrons in Cr
 - c. the number of 4d electrons in Y
 - d. the number of 6p electrons in Pb
53. Name an element in the fourth period (row) of the periodic table with:
 - a. five valence electrons
 - b. four 4p electrons
 - c. three 3d electrons
 - d. a complete outer shell
54. Name an element in the third period (row) of the periodic table with:
 - a. three valence electrons
 - b. four 3p electrons
 - c. six 3p electrons
 - d. two 3s electrons and zero 3p electrons

Valence Electrons and Simple Chemical Behavior from the Periodic Table

55. Determine the number of valence electrons in each element.
a. Ba b. Cs c. Ni d. S
56. Determine the number of valence electrons in each element. Which elements do you expect to lose electrons in chemical reactions? Which do you expect to gain electrons?
a. Al b. Sn c. Br d. Se
57. Which outer electron configuration would you expect to correspond to a reactive metal? To a reactive nonmetal?
a. ns^2 b. ns^2np^6
c. ns^2np^5 d. ns^2np^2
58. Which outer electron configuration would you expect to correspond to a noble gas? To a metalloid?
a. ns^2 b. ns^2np^6
c. ns^2np^5 d. ns^2np^2
59. List the number of valence electrons for each element and classify each element as an alkali metal, alkaline earth metal, halogen, or noble gas.
a. sodium b. iodine c. calcium
d. barium e. krypton
60. List the number of valence electrons in each element and classify each element as an alkali metal, alkaline earth metal, halogen, or noble gas.
a. F b. Sr c. K d. Ne e. At
61. Which pair of elements do you expect to be most similar? Why?
a. N and Ni b. Mo and Sn c. Na and Mg
d. Cl and F e. Si and P
62. Which pair of elements do you expect to be most similar? Why?
a. nitrogen and oxygen
b. titanium and gallium
c. lithium and sodium
d. germanium and arsenic
e. argon and bromine
63. Predict the charge of the ion formed by each element and write the electron configuration of the ion.
a. O b. K c. Al d. Rb
64. Predict the charge of the ion formed by each element and write the electron configuration of the ion.
a. Mg b. N c. F d. Na

Coulomb's Law and Effective Nuclear Charge

65. According to Coulomb's law, which pair of charged particles has the lowest potential energy?
a. a particle with a 1− charge separated by 150 pm from a particle with a 2+ charge
b. a particle with a 1− charge separated by 150 pm from a particle with a 1+ charge
c. a particle with a 1− charge separated by 100 pm from a particle with a 3+ charge
66. According to Coulomb's law, rank the interactions between charged particles from lowest potential energy to highest potential energy.
a. a 1+ charge and a 1− charge separated by 100 pm
b. a 2+ charge and a 1− charge separated by 100 pm
c. a 1+ charge and a 1+ charge separated by 100 pm
d. a 1+ charge and a 1− charge separated by 200 pm

67. Which electrons experience a greater effective nuclear charge: the valence electrons in beryllium or the valence electrons in nitrogen? Why?
68. Arrange the atoms according to decreasing effective nuclear charge experienced by their valence electrons: S, Mg, Al, Si.
69. If core electrons completely shielded valence electrons from nuclear charge (i.e., if each core electron reduced nuclear charge by one unit) and if valence electrons did not shield one another from nuclear charge at all, what would be the effective nuclear charge experienced by the valence electrons of each atom?
a. K b. Ca c. O d. C
70. In Section 3.6, we estimated the effective nuclear charge on beryllium's valence electrons to be slightly greater than 2+. What would a similar treatment predict for the effective nuclear charge on boron's valence electrons? Would you expect the effective nuclear charge to be different for boron's 2s electrons compared to its 2p electron? In what way? (Hint: Consider the shape of the 2p orbital compared to that of the 2s orbital.)

Atomic Radius

71. Choose the larger atom in each pair.
a. Al or In b. Si or N c. P or Pb d. C or F
72. Choose the larger atom in each pair.
a. Sn or Si b. Br or Ga c. Sn or Bi d. Se or Sn
73. Arrange these elements in order of increasing atomic radius: Ca, Rb, S, Si, Ge, F.
74. Arrange these elements in order of decreasing atomic radius: Cs, Sb, S, Pb, Se.

Ionic Electron Configurations, Ionic Radii, Magnetic Properties, and Ionization Energy

75. Write the electron configuration for each ion.
a. O^{2-} b. Br^- c. Sr^{2+} d. Co^{3+} e. Cu^{2+}
76. Write the electron configuration for each ion.
a. Cl^- b. P^{3-} c. K^- d. Mo^{3+} e. V^{3+}
77. Write orbital diagrams for each ion and determine if the ion is diamagnetic or paramagnetic.
a. V^{3+} b. Cr^{3+} c. Ni^{2+} d. Fe^{3+}
78. Write orbital diagrams for each ion and determine if the ion is diamagnetic or paramagnetic.
a. Cd^{2+} b. Au^+ c. Mo^{3+} d. Zr^{2+}
79. Which is the larger species in each pair?
a. Li or Li^+ b. I^- or Cs^+
c. Cr or Cr^{3+} d. O or O^{2-}
80. Which is the larger species in each pair?
a. Sr or Sr^{2+} b. N or N^{3-} c. Ni or Ni^{2+} d. S^{2-} or Ca^{2+}
81. Arrange this isoelectronic series in order of decreasing radius: F^- , O^{2-} , Mg^{2+} , Na^+ .
82. Arrange this isoelectronic series in order of increasing atomic radius: Se^{2-} , Sr^{2+} , Rb^+ , Br^- .
83. Choose the element with the higher first ionization energy in each pair.
a. Br or Bi b. Na or Rb c. As or At d. P or Sn
84. Choose the element with the higher first ionization energy in each pair.
a. P or I b. Si or Cl c. P or Sb d. Ga or Ge

85. Arrange these elements in order of increasing first ionization energy: Si, F, In, N.
86. Arrange these elements in order of decreasing first ionization energy: Cl, S, Sn, Pb.
87. For each element, predict where the “jump” occurs for successive ionization energies. (For example, does the jump occur between the first and second ionization energies, the second and third, or the third and fourth?)
 a. Be b. N c. O d. Li
88. Consider this set of successive ionization energies:
 $IE_1 = 578 \text{ kJ/mol}$ $IE_2 = 1820 \text{ kJ/mol}$
 $IE_3 = 2750 \text{ kJ/mol}$ $IE_4 = 11,600 \text{ kJ/mol}$
- To which third-period element do these ionization values belong?

Electron Affinities and Metallic Character

89. Choose the element with the more negative (more exothermic) electron affinity in each pair.
 a. Na or Rb b. B or S c. C or N d. Li or F
90. Choose the element with the more negative (more exothermic) electron affinity in each pair.
 a. Mg or S b. K or Cs c. Si or P d. Ga or Br
91. Choose the more metallic element in each pair.
 a. Sr or Sb b. As or Bi c. Cl or O d. S or As
92. Choose the more metallic element in each pair.
 a. Sb or Pb b. K or Ge c. Ge or Sb d. As or Sn
93. Arrange these elements in order of increasing metallic character: Fr, Sb, In, S, Ba, Se.
94. Arrange these elements in order of decreasing metallic character: Sr, N, Si, P, Ga, Al.

CUMULATIVE PROBLEMS

95. Bromine is a highly reactive liquid, whereas krypton is an inert gas. Explain the difference based on their electron configurations.
96. Potassium is a highly reactive metal, whereas argon is an inert gas. Explain the difference based on their electron configurations.
97. Both vanadium and its $3+$ ion are paramagnetic. Use electron configurations to explain this statement.
98. Use electron configurations to explain why copper is paramagnetic while its $1+$ ion is not.
99. Suppose you were trying to find a substitute for K^+ for some application. Where would you begin your search? Which ions are most like K^+ ? For each ion you propose, explain the ways in which it is similar to K^+ and the ways it is different. Refer to periodic trends in your discussion.
100. Suppose you were trying to find a substitute for Na^+ for some application. Where would you begin your search? What ions are most like Na^+ ? For each ion you propose, explain the ways in which it is similar to Na^+ and the ways it is different. Use periodic trends in your discussion.
101. Life on Earth evolved based on the element carbon. Based on periodic properties, what two or three elements would you expect to be most like carbon?
102. Which pair of elements would you expect to have the most similar atomic radii, and why?
 a. Si and Ga b. Si and Ge c. Si and As
103. Consider these elements: N, Mg, O, F, Al.
 a. Write the electron configuration for each element.
 b. Arrange the elements in order of decreasing atomic radius.
 c. Arrange the elements in order of increasing ionization energy.
 d. Use the electron configurations in part a to explain the differences between your answers to parts b and c.
104. Consider these elements: P, Ca, Si, S, Ga.
 a. Write the electron configuration for each element.
 b. Arrange the elements in order of decreasing atomic radius.
 c. Arrange the elements in order of increasing ionization energy.
 d. Use the electron configurations in part a to explain the differences between your answers to parts b and c.
105. Explain why atomic radius decreases as we move to the right across a period for main-group elements but not for transition elements.
106. Explain why vanadium (radius = 134 pm) and copper (radius = 128 pm) have nearly identical atomic radii, even though the atomic number of copper is about 25% higher than that of vanadium. What would you predict about the relative densities of these two metals? Look up the densities in a reference book, periodic table, or on the Internet. Are your predictions correct?
107. The lightest noble gases, such as helium and neon, are completely inert—they do not form any chemical compounds whatsoever. The heavier noble gases, in contrast, do form a limited number of compounds. Explain this difference in terms of trends in fundamental periodic properties.
108. The lightest halogen is also the most chemically reactive, and reactivity generally decreases as we move down the column of halogens in the periodic table. Explain this trend in terms of periodic properties.
109. Write general outer electron configurations (ns^xnp^y) for groups 6A and 7A in the periodic table. The electron affinity of each group 7A element is more negative than that of each corresponding group 6A element. Use the electron configurations to explain this observation.
110. The electron affinity of each group 5A element is more positive than that of each corresponding group 4A element. Use the outer electron configurations for these columns to suggest a reason for this behavior.
111. The elements with atomic numbers 35 and 53 have similar chemical properties. Based on their electronic configurations predict the atomic number of a heavier element that also should have these chemical properties.
112. Write the electronic configurations of the six cations that form from sulfur by the loss of one to six electrons. For those cations that have unpaired electrons, write orbital diagrams.
113. You have cracked a secret code that uses elemental symbols to spell words. The code uses numbers to designate the elemental symbols. Each number is the sum of the atomic number

and the highest principal quantum number of the highest occupied orbital of the element whose symbol is to be used. Messages may be written forward or backward. Decode the following messages:

- 10, 12, 58, 11, 7, 44, 63, 66
 - 9, 99, 30, 95, 19, 47, 79
114. The electron affinity of sodium is lower than that of lithium, while the electron affinity of chlorine is higher than that of fluorine. Suggest an explanation for this observation.

115. Use Coulomb's law to calculate the ionization energy in kJ/mol of an atom composed of a proton and an electron separated by 100.00 pm. What wavelength of light would have sufficient energy to ionize the atom?
116. The first ionization energy of sodium is 496 kJ/mol. Use Coulomb's law to estimate the average distance between the sodium nucleus and the 3s electron. How does this distance compare to the atomic radius of sodium? Explain the difference.

CHALLENGE PROBLEMS

117. Consider the densities and atomic radii of the noble gases at 25°C:

Element	Atomic Radius (pm)	Density (g/L)
He	32	0.18
Ne	70	0.90
Ar	98	—
Kr	112	3.75
Xe	130	—
Rn	—	9.73

- Estimate the densities of argon and xenon by interpolation from the data.
 - Provide an estimate of the density of the yet undiscovered element with atomic number 118 by extrapolation from the data.
 - Use the molar mass of neon to estimate the mass of a neon atom. Then use the atomic radius of neon to calculate the average density of a neon atom. How does this density compare to the density of neon gas? What does this comparison suggest about the nature of neon gas?
 - Use the densities and molar masses of krypton and neon to calculate the number of atoms of each element found in a volume of 1.0 L. Use these values to estimate the number of atoms that occur in 1.0 L of Ar. Now use the molar mass of argon to estimate the density of Ar. How does this estimate compare to that in part a?
118. As you have seen, the periodic table is a result of empirical observation (i.e., the periodic law), but quantum-mechanical theory explains why the table is so arranged. Suppose that, in another universe, quantum theory was such that there were one *s* orbital but only two *p* orbitals (instead of three) and only three *d* orbitals (instead of five). Draw out the first four periods of the periodic table in this alternative universe. Which elements would be the equivalent of the noble gases? Halogens? Alkali metals?
119. Consider the metals in the first transition series. Use periodic trends to predict a trend in density as we move to the right across the series.
120. Imagine a universe in which the value of m_s can be $+1/2$, 0, and $-1/2$. Assuming that all the other quantum numbers can take only the values possible in our world and that the Pauli exclusion principle applies, determine:
- the new electronic configuration of neon
 - the atomic number of the element with a completed $n = 2$ shell
 - the number of unpaired electrons in fluorine
121. A carbon atom can absorb radiation of various wavelengths with resulting changes in its electronic configuration. Write orbital diagrams for the electronic configurations of carbon that result from absorption of the three longest wavelengths of radiation that change its electronic configuration.
122. Only trace amounts of the synthetic element darmstadtium, atomic number 110, have been obtained. The element is so highly unstable that no observations of its properties have been possible. Based on its position in the periodic table, propose three different reasonable valence electron configurations for this element.
123. What is the atomic number of the as yet undiscovered element in which the 8s and 8p electron energy levels fill? Predict the chemical behavior of this element.
124. The trend in second ionization energy for the elements from lithium to fluorine is not a regular one. Predict which of these elements has the highest second ionization energy and which has the lowest and explain. Of the elements N, O, and F, O has the highest and N the lowest second ionization energy. Explain.
125. Unlike the elements in groups 1A and 2A, those in group 3A do not show a regular decrease in first ionization energy in going down the column. Explain the irregularities.
126. Using the data in Figures 3.19 and 3.20, calculate ΔE (the change in energy) for the reaction
- $$\text{Na(g)} + \text{Cl(g)} \longrightarrow \text{Na}^+(\text{g}) + \text{Cl}^-(\text{g})$$
127. Even though adding two electrons to O or S forms an ion with a noble gas electron configuration, the second electron affinity of both of these elements is positive. Explain.
128. In Section 3.5 we discussed the metalloids, which form a diagonal band separating the metals from the nonmetals. There are other instances in which elements such as lithium and magnesium that are diagonal to each other have comparable metallic character. Suggest an explanation for this observation.
129. The heaviest known alkaline earth metal is radium, atomic number 88. Find the atomic numbers of the as yet undiscovered next two members of the series.
130. Predict the electronic configurations of the first two excited states (next higher energy states beyond the ground state) of Pd.

CONCEPTUAL PROBLEMS

131. Imagine that in another universe, atoms and elements are identical to ours, except that atoms with six valence electrons have particular stability (in contrast to our universe where atoms with eight valence electrons have particular stability). Give an example of an element in the alternative universe that corresponds to:
- a noble gas
 - a reactive nonmetal
 - a reactive metal
132. The outermost valence electron in atom A experiences an effective nuclear charge of $2+$ and is on average 225 pm from the nucleus. The outermost valence electron in atom B experiences an effective nuclear charge of $1+$ and is on average 175 pm from the nucleus. Which atom (A or B) has the higher first ionization energy? Explain.
133. Determine whether each statement regarding penetration and shielding is true or false. (Assume that all lower energy orbitals are fully occupied.)
- An electron in a $3s$ orbital is more shielded than an electron in a $2s$ orbital.
 - An electron in a $3s$ orbital penetrates into the region occupied by core electrons more than electrons in a $3p$ orbital.
 - An electron in an orbital that penetrates closer to the nucleus will always experience more shielding than an electron in an orbital that does not penetrate as far.
 - An electron in an orbital that penetrates close to the nucleus will tend to experience a higher effective nuclear charge than one that does not.
134. Give a combination of four quantum numbers that could be assigned to an electron occupying a $5p$ orbital. Do the same for an electron occupying a $6d$ orbital.
135. Use the trends in ionization energy and electron affinity to explain why calcium fluoride has the formula CaF_2 and not Ca_2F or CaF .

QUESTIONS FOR GROUP WORK

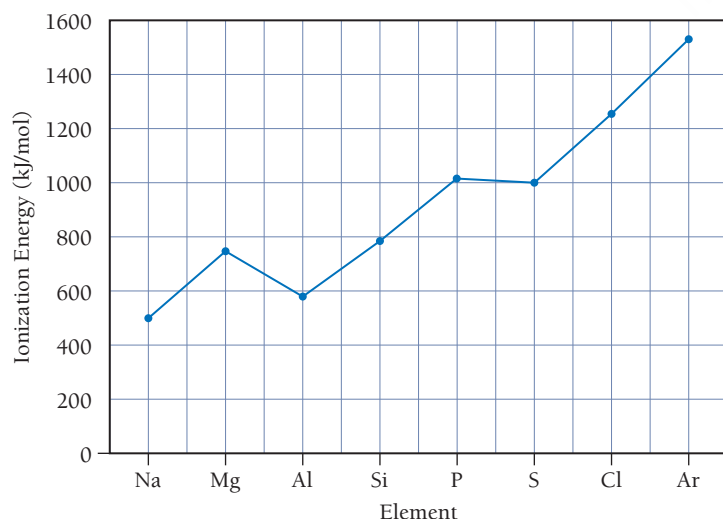
Active Classroom Learning

Discuss these questions with the group and record your consensus answer.

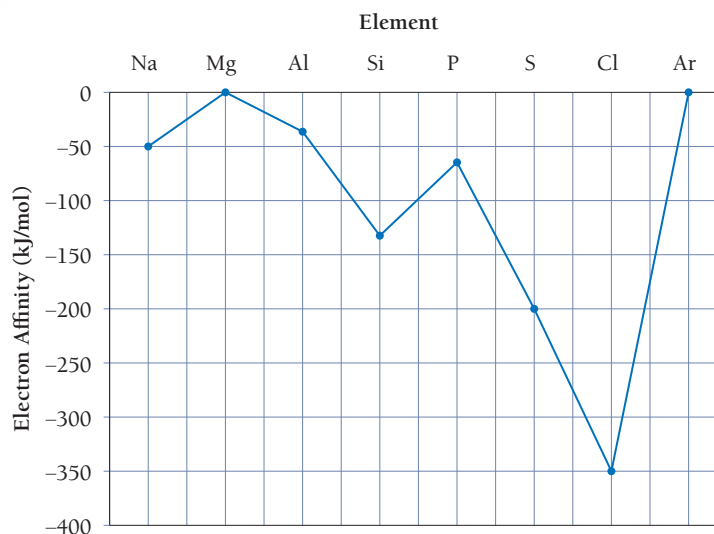
136. In a complete sentence, describe the relationship between shielding and penetration.
137. Play a game to memorize the order in which orbitals fill. Have each group member in turn state the name of the next orbital to fill and the maximum number of electrons it can hold (for example, “ $1s$ two,” “ $2s$ two,” “ $2p$ six”). If a member gets stuck, other group members can help, consulting Figure 3.8 and the accompanying text summary if necessary. However, when a member gets stuck, the next player starts back at “ $1s$ two.” Keep going until each group member can list all the orbitals in order up to “ $6s$ two.”
138. Sketch a periodic table (without element symbols). Include the correct number of rows and columns in the s , p , d , and f blocks. Shade in the squares for elements that have irregular electron configurations.
139. In complete sentences, explain: a) why Se^{2-} and Br^- are about the same size; b) why Br^- is slightly smaller than Se^{2-} ; and c) which singly charged cation you would expect to be approximately the same size as Se^{2-} and Br^- and why.
140. Have each member of your group sketch a periodic table indicating a periodic trend (atomic size, first ionization energy, metallic character, etc.). Have each member present his or her table to the rest of the group and explain the trend based on concepts such as orbital size or effective nuclear charge.

DATA INTERPRETATION AND ANALYSIS

141. The following graphs show the first ionization energies and electron affinities of the period 3 elements. Refer to the graphs to answer the questions that follow.



▲ First Ionization Energies of Period 3 Elements



▲ Electron Affinities of Period 3 Elements

- a. Describe the general trend in period 3 first ionization energies as you move from left to right across the periodic table. Explain why this trend occurs.
- b. The trend in first ionization energy has two exceptions: one at Al and another S. Explain why the first ionization energy of Al is lower than that of Mg and why the first ionization of S is less than that of P.
- c. Describe the general trend in period 3 electron affinities as you move from left to right across the periodic table. Explain why this trend occurs.
- d. The trend in electron affinities has exceptions at Mg and P. Explain why the electron affinity of Mg is more positive (less exothermic) than that of Na and why the electron affinity of P is more positive (less exothermic) than that of Si.
- e. Determine the overall energy change for removing one electron from Na and adding that electron to Cl. Is the exchange of the electron exothermic or endothermic?

ANSWERS TO CONCEPTUAL CONNECTIONS

- Cc 3.1 (d) Cr is in the transition elements section of the periodic table (see Figure 3.4).
- Cc 3.2 (a) Since the charges are opposite, the potential energy of the interaction is negative. As the charges get closer together, r becomes smaller and the potential energy decreases (it becomes more negative).
- Cc 3.3 (c) Penetration results in less shielding from nuclear charge and therefore lower energy.
- Cc 3.4 $n = 4, l = 0, m_l = 0, m_s = +\frac{1}{2}; n = 4, l = 0, m_l = 0, m_s = -\frac{1}{2}$
- Cc 3.5 (c) Because Z_{eff} increases from left to right across a row in the periodic table, the valence electrons in S experience a greater effective nuclear charge than the valence electrons in Al or in Mg.
- Cc 3.6 The isotopes of an element all have the same radius for two reasons: (1) neutrons are negligibly small compared to the size of an atom, and therefore extra neutrons do not increase atomic size; and (2) neutrons have no charge and therefore do not attract electrons in the way that protons do.
- Cc 3.7 As you can see from the successive ionization energies of any element, valence electrons are held most loosely and can therefore be transferred or shared most easily. Core electrons, in contrast, are held tightly and are not easily transferred or shared. Consequently, valence electrons play a central role in chemical bonding.
- Cc 3.8 The 3s electron in sodium has a relatively low ionization energy (496 kJ/mol) because it is a valence electron. The energetic cost for sodium to lose a second electron is extraordinarily high (4560 kJ/mol) because the next electron to be lost is a core electron (2p). Similarly, the electron affinity of chlorine to gain one electron (−349 kJ/mol) is highly exothermic since the added electron completes chlorine's valence shell. The gain of a second electron by the negatively charged chlorine anion is not so favorable. Therefore, we expect sodium and chlorine to combine in a 1:1 ratio.

4.1	Hydrogen, Oxygen, and Water	159
4.2	Types of Chemical Bonds	160
4.3	Representing Compounds: Chemical Formulas and Molecular Models	162
4.4	The Lewis Model: Representing Valence Electrons with Dots	164
4.5	Ionic Bonding: The Lewis Model and Lattice Energies	166
4.6	Ionic Compounds: Formulas and Names	169
4.7	Covalent Bonding: Simple Lewis Structures	175
4.8	Molecular Compounds: Formulas and Names	177
4.9	Formula Mass and the Mole Concept for Compounds	179
4.10	Composition of Compounds	181
4.11	Determining a Chemical Formula from Experimental Data	186
4.12	Organic Compounds	191
	Key Learning Outcomes	193

Periods

1	1H 1.01 hydrogen	2He 4.00 helium																																							
2	3Li 6.94 lithium	4Be 9.01 beryllium																																							
3	11Na 22.99 sodium	12Mg 24.31 magnesium	3B 10.81 boron	4C 12.01 carbon	5N 14.01 nitrogen	6O 16.00 oxygen	7F 18.99 fluorine	8Ne 20.18 neon																																	
4	19K 39.10 potassium	20Ca 40.08 calcium	21Sc 44.96 scandium	22Ti 47.88 titanium	23V 50.94 vanadium	24Cr 52.00 chromium	25Mn 54.94 manganese	26Fe 55.85 iron	27Co 58.93 cobalt	28Ni 58.69 nickel	29Cu 63.55 copper	30Zn 65.39 zinc	31Ga 69.72 gallium	32Ge 72.61 germanium																											
5	37Rb 85.47 rubidium	38Sr 87.62 strontium	39Y 88.91 yttrium	40Zr 91.22 zirconium	41Nb 92.91 niobium	42Mo 95.94 molybdenum	43Tc (99) technetium	44Ru 101.07 ruthenium	45Rh 102.91 rhodium	46Pd 106.42 palladium	47Ag 107.87 silver	48Cd 112.41 cadmium	49In 114.82 indium	50Sn 118.71 tin																											
6	55Cs 132.91 cesium	56Ba 137.33 barium	57La 138.91 lanthanum	72Hf 178.49 hafnium	73Ta 180.95 tantalum	74W 183.85 tungsten	75Re 186.21 rhenium	76Os 190.2 osmium	77Ir 192.22 iridium	78Pt 195.08 platinum	79Au 196.97 gold	80Hg 200.59 mercury	81Tl 204.38 thallium	82Pb 207.2 lead	83Bi 208.98 bismuth																										
7	87Fr (223) francium	88Ra (226) radium	89Ac (227) actinium	104Rf (261) rutherfordium	105Db (262) dubnium	106Sg (263) seaborgium	107Bh (262) bohrium	108Hs (265) hassium	109Mt (266) meitnerium	110Ds (269) darmstadtium	111Rg (272) roentgenium	112Cn (277) copernicium				113Nh (286) nihonium	114Fl (289) flerovium	115Mc (290) moscovium	116Lv (293) livermorium	117Ts (294) tennessine	118Og (294) oganesson																				
			<p>Lanthanides</p> <table> <tr> <td>58Ce 140.12 cerium</td> <td>59Pr 140.91 praseodymium</td> <td>60Nd 144.24 neodymium</td> <td>61Pm (147) promethium</td> <td>62Sm 150.36 samarium</td> <td>63Eu 151.97 europium</td> <td>64Gd 157.25 gadolinium</td> <td>65Tb 158.93 terbium</td> <td>66Dy 162.50 dysprosium</td> <td>67Ho 164.93 holmium</td> <td>68Er 167.26 erbium</td> </tr> </table> <p>Actinides</p> <table> <tr> <td>90Th (232) thorium</td> <td>91Pa (231) protactinium</td> <td>92U (238) uranium</td> <td>93Np (237) neptunium</td> <td>94Pu (244) plutonium</td> <td>95Am (243) americium</td> <td>96Cm (247) curium</td> <td>97Bk (247) berkelium</td> <td>98Cf (251) californium</td> <td>99Es (252) einsteinium</td> <td>100Fm (257) fermium</td> </tr> </table>																	58Ce 140.12 cerium	59Pr 140.91 praseodymium	60Nd 144.24 neodymium	61Pm (147) promethium	62Sm 150.36 samarium	63Eu 151.97 europium	64Gd 157.25 gadolinium	65Tb 158.93 terbium	66Dy 162.50 dysprosium	67Ho 164.93 holmium	68Er 167.26 erbium	90Th (232) thorium	91Pa (231) protactinium	92U (238) uranium	93Np (237) neptunium	94Pu (244) plutonium	95Am (243) americium	96Cm (247) curium	97Bk (247) berkelium	98Cf (251) californium	99Es (252) einsteinium	100Fm (257) fermium
58Ce 140.12 cerium	59Pr 140.91 praseodymium	60Nd 144.24 neodymium	61Pm (147) promethium	62Sm 150.36 samarium	63Eu 151.97 europium	64Gd 157.25 gadolinium	65Tb 158.93 terbium	66Dy 162.50 dysprosium	67Ho 164.93 holmium	68Er 167.26 erbium																															
90Th (232) thorium	91Pa (231) protactinium	92U (238) uranium	93Np (237) neptunium	94Pu (244) plutonium	95Am (243) americium	96Cm (247) curium	97Bk (247) berkelium	98Cf (251) californium	99Es (252) einsteinium	100Fm (257) fermium																															

CHAPTER

4

Molecules and Compounds

HOW MANY DIFFERENT SUBSTANCES




exist? Our world contains about 91 different naturally existing elements, so there are at least 91 different substances. However, the world would be dull—not to mention lifeless—with only 91 different substances. Fortunately, elements combine with each other to form *compounds*. Just as combinations of only 26 letters in our English alphabet allow for an almost limitless number of words, each with its own specific meaning, so combinations of the 91 naturally occurring elements allow for an almost limitless number of compounds, each with its own specific properties. The great diversity of substances that we find in nature is a direct result of the ability of elements to form compounds. Life, for example, could not exist with just 91 different elements. It takes compounds, in all of their diversity, to make life possible.

4.1 Hydrogen, Oxygen, and Water

Hydrogen (H_2) is an explosive gas used as a fuel in rocket engines. Oxygen (O_2), also a gas, is a natural component of the air on Earth. Oxygen is not itself flammable but must be present for combustion (burning) to occur. Hydrogen and oxygen both have extremely low boiling points, as you can see from the table on the next page. When hydrogen and oxygen combine to form the compound water (H_2O), however, a dramatically different substance results.

“I have just returned from a short vacation for which the only books I took were a half-dozen detective stories and your ‘Chemical Bond.’ I found yours the most exciting of the lot.”

—Gilbert N. Lewis (1875–1946), in a letter to Linus Pauling in 1939

Selected Properties	Hydrogen 	Oxygen 	Water 
Boiling Point	−253 °C	−183 °C	100 °C
State at Room Temperature	Gas	Gas	Liquid
Flammability	Explosive	Necessary for combustion	Used to extinguish flame

First of all, water is a liquid rather than a gas at room temperature, and its boiling point is many degrees higher than the boiling points of hydrogen and oxygen. Second, instead of being flammable (like hydrogen gas) or supporting combustion (like oxygen gas), water actually extinguishes flames. Water is nothing like the hydrogen and oxygen from which it forms. The dramatic difference between the elements hydrogen and oxygen and the compound water is typical of the differences between elements and the compounds that they form. *When two or more elements combine to form a compound, an entirely new substance results.*

Although some of the substances that we encounter in everyday life are elements, most are compounds. As we discussed in Chapter 1, a compound is different from a mixture of elements. In a compound, elements combine in fixed, definite proportions; in a mixture, elements can mix in any proportion whatsoever. Consider the difference between a hydrogen–oxygen mixture and water as shown in **Figure 4.1** ▼. A hydrogen–oxygen mixture can have any proportion of hydrogen and oxygen gas. Water, by contrast, is composed of water molecules that always contain two hydrogen atoms to every one oxygen atom. Water has a definite proportion of hydrogen to oxygen.

In this chapter we examine compounds. We discuss how to represent them, how to name them, and why they form. In the last part of the chapter, we learn how to quantify their elemental composition.

Mixtures and Compounds

Hydrogen and Oxygen Mixture
This can have any ratio of hydrogen to oxygen.

Water (A Compound)
Water molecules have a fixed ratio of hydrogen (two atoms) to oxygen (one atom).



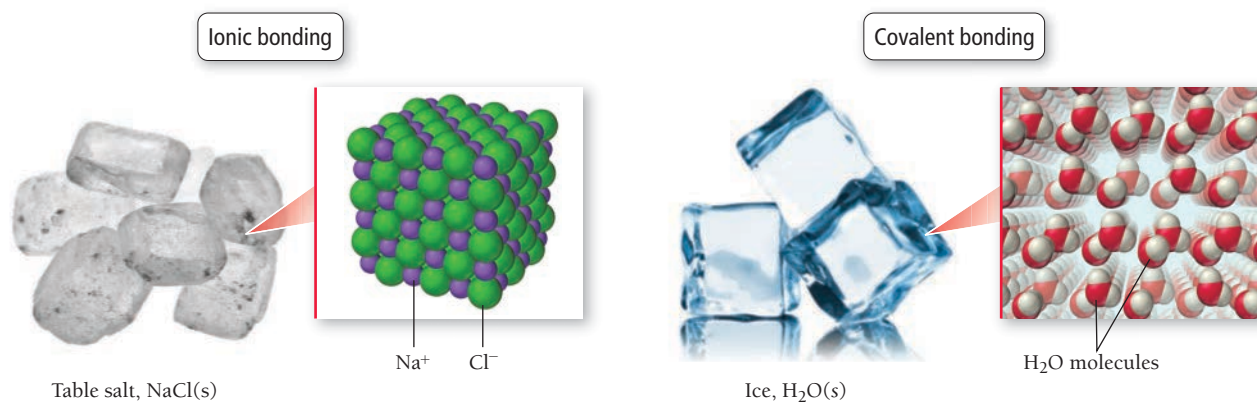
► **FIGURE 4.1 Mixtures and Compounds**
The balloon in this illustration contains a mixture of hydrogen gas and oxygen gas. The glass contains water, a compound of hydrogen and oxygen.

4.2 Types of Chemical Bonds

A **chemical bond** is the force that holds atoms together in a compound. We begin our discussion of chemical bonding by asking why bonds form in the first place. The answer to this question is not simple and involves not only quantum mechanics but also some thermodynamics that we do not cover until Chapter 18. Nonetheless, we can address an important *aspect* of the answer now: *Chemical bonds form because they lower the potential energy of the charged particles that compose atoms.*

Recall from Section 3.5 that when an outer principal quantum level is completely full, the overall potential energy of the electrons that occupy that level is particularly low. Recall also that only the noble gases have full outer principal quantum levels. Because the rest of the elements do *not* possess the stability of the noble gases, they form chemical bonds to become more stable (to lower the potential energy of the charged particles that compose them).

As we have already seen, atoms are composed of particles with positive charges (the protons in the nucleus) and negative charges (the electrons). When two atoms approach each other, the electrons of one atom are attracted to the nucleus of the other according to Coulomb's law (see Section 3.3) and vice versa. However, at the same time, the electrons of each atom repel the electrons of the other, and the nucleus of each atom repels the nucleus of the other. The result is a complex set of interactions



Metal and Nonmetal

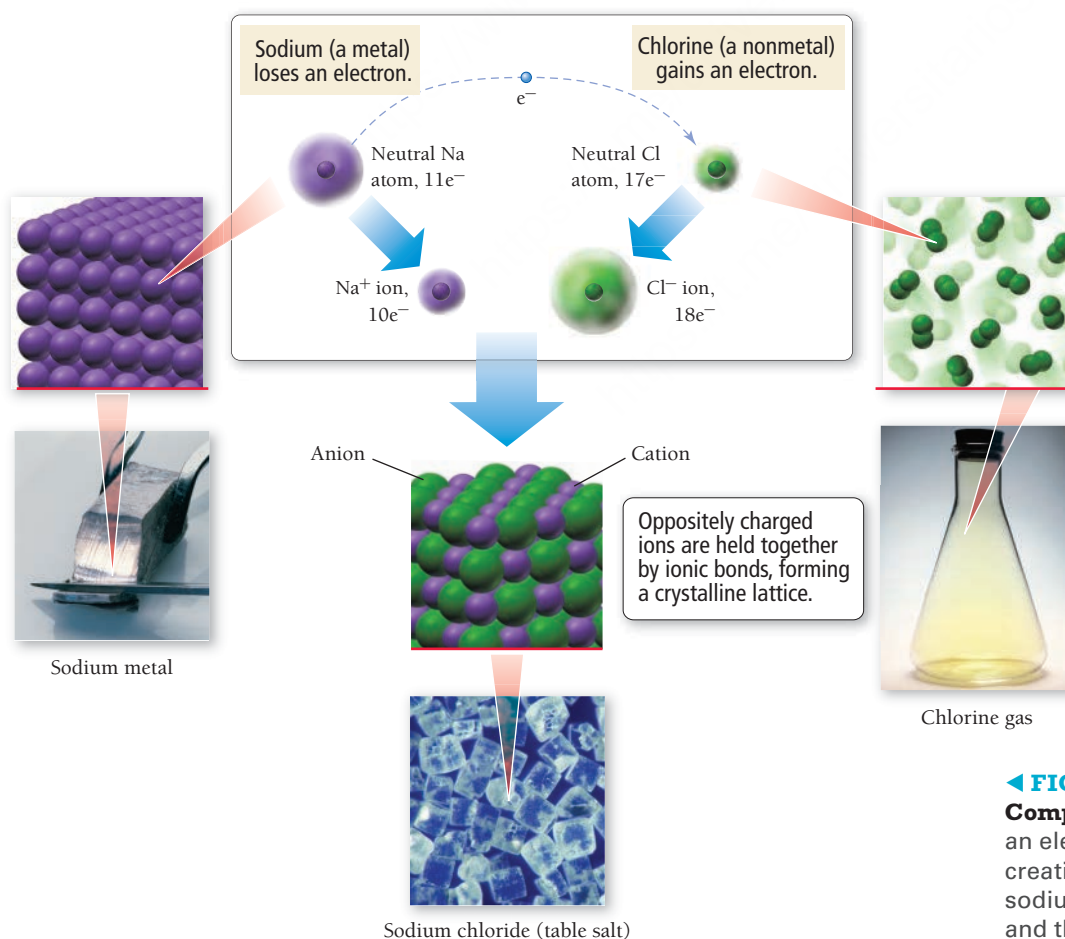
Nonmetal and Nonmetal

▲ **FIGURE 4.2** Ionic and Covalent Bonding

among a large number of charged particles. If these interactions lead to an overall net reduction of potential energy between the charged particles, a chemical bond forms. Bonding theories help us to predict the circumstances under which bonds form and also the properties of the resultant molecules. We broadly classify chemical bonds into two types—*ionic* and *covalent*—depending on the kind of atoms involved in the bonding (**Figure 4.2 ▲**).

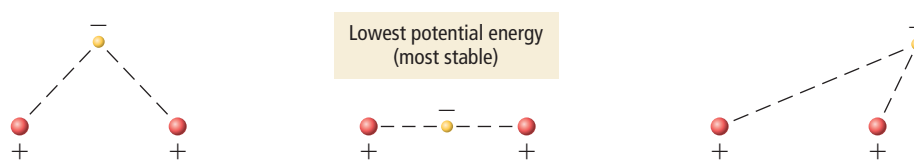
The bond that forms between a metal and a nonmetal is an **ionic bond**. Recall from Chapter 3 that metals have a tendency to lose electrons and that nonmetals have a tendency to gain them. Therefore, when a metal interacts with a nonmetal, it can transfer one or more of its electrons to the nonmetal. The metal atom then becomes a *cation* (a positively charged ion), and the nonmetal atom becomes an *anion* (a negatively charged ion), as shown in **Figure 4.3 ▼**. These oppositely charged ions attract one another

The Formation of an Ionic Compound



▼ **FIGURE 4.3** The Formation of an Ionic Compound An atom of sodium (a metal) loses an electron to an atom of chlorine (a nonmetal), creating a pair of oppositely charged ions. The sodium cation then attracts the chloride anion, and the two form a crystalline lattice.

► **FIGURE 4.4** Possible Configurations of One Negatively Charged Particle and Two Positively Charged Ones



according to Coulomb's law and form an **ionic compound**, which in the solid state is composed of a *lattice*—a regular three-dimensional array—of alternating cations and anions.

The bond that forms between two or more nonmetals is a **covalent bond**. In Chapter 3 we saw that nonmetals tend to have high ionization energies (their electrons are relatively difficult to remove). Therefore, when a nonmetal bonds with another nonmetal, neither atom transfers electrons to the other. Instead, the two atoms *share* some electrons. The shared electrons interact with the nuclei of both of the bonding atoms, lowering their potential energy in accordance with Coulomb's law. Covalently bonded atoms form *molecules*, and the resulting compounds are called **molecular compounds**.

We can understand the stability of a covalent bond by considering the most stable arrangement (the one with the lowest potential energy) of two positively charged particles separated by a small distance and a negatively charged particle. As **Figure 4.4** illustrates, the arrangement in which the negatively charged particle lies *between* the two positively charged ones has the lowest potential energy because in this arrangement, the negatively charged particle interacts most strongly with *both of the positively charged ones*. In a sense, the negatively charged particle holds the two positively charged ones together. Similarly, shared electrons in a covalent chemical bond *hold* the bonding atoms together by attracting the positive charges of their nuclei.

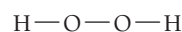
4.3 Representing Compounds: Chemical Formulas and Molecular Models

The quickest and easiest way to represent a compound is with its **chemical formula**, which indicates the elements present in the compound and the relative number of atoms or ions of each. For example, H_2O is the chemical formula for water—it indicates that water consists of hydrogen and oxygen atoms in a two-to-one ratio. The formula contains the symbol for each element and a subscript indicating the relative number of atoms of the element. A subscript of 1 is typically omitted. Chemical formulas normally list the more metallic (or more positively charged) element first, followed by the less metallic (or more negatively charged) element. Examples of common chemical formulas include NaCl for sodium chloride, indicating sodium and chloride ions in a one-to-one ratio; CO_2 for carbon dioxide, indicating carbon and oxygen atoms in a one-to-two ratio; and CCl_4 for carbon tetrachloride, indicating carbon and chlorine in a one-to-four ratio.

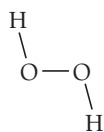
Types of Chemical Formulas

We categorize chemical formulas into three different types: empirical, molecular, and structural. An **empirical formula** indicates the *relative* number of atoms of each element in a compound. A **molecular formula** indicates the *actual* number of atoms of each element in a molecule of a compound. For example, the empirical formula for hydrogen peroxide is HO , but its molecular formula is H_2O_2 . The molecular formula is always a whole-number multiple of the empirical formula. For some compounds, the empirical formula and the molecular formula are identical. For example, the empirical and molecular formula for water is H_2O because each water molecule contains two hydrogen atoms and one oxygen atom, and no simpler whole-number ratio can express the relative number of hydrogen atoms to oxygen atoms.

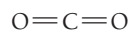
A **structural formula** uses lines to represent covalent bonds and shows how atoms in a molecule are connected or bonded to each other. The structural formula for H_2O_2 is:



Structural formulas can also indicate a sense of the molecule's geometry. The structural formula for hydrogen peroxide can also be written this way:



This version represents the approximate angles between bonds, giving a sense of the molecule's shape. Structural formulas can also depict the different types of bonds that occur within molecules. For example, consider the structural formula for carbon dioxide:



The two lines between each carbon and oxygen atom represent a double bond, which is generally stronger and shorter than a single bond (represented by a single line). A single bond corresponds to one shared electron pair, while a double bond corresponds to two shared electron pairs, as we will discuss in Section 4.7.

The type of formula we use depends on how much we know about the compound and how much we want to communicate. A structural formula communicates the most information, while an empirical formula communicates the least.

Structural Formulas

4.1

Cc

Conceptual
Connection

Write the structural formula for water.

EXAMPLE 4.1

Molecular and Empirical Formulas

Write the empirical formula for the compound represented by each molecular formula.

- (a) C_4H_8
- (b) B_2H_6
- (c) CCl_4

SOLUTION

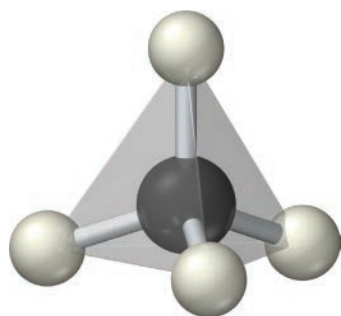
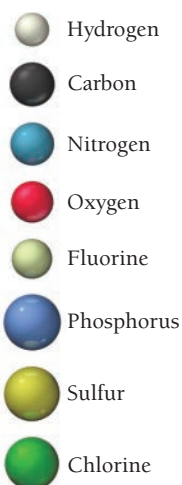
To determine the empirical formula from a molecular formula, divide the subscripts by the greatest common factor (the largest number that divides exactly into all of the subscripts).

- (a) For C_4H_8 , the greatest common factor is 4. The empirical formula is therefore CH_2 .
- (b) For B_2H_6 , the greatest common factor is 2. The empirical formula is therefore BH_3 .
- (c) For CCl_4 , the only common factor is 1, so the empirical formula and the molecular formula are the same.

FOR PRACTICE 4.1

Write the empirical formula for the compound represented by each molecular formula.

- (a) C_5H_{12}
- (b) Hg_2Cl_2
- (c) $\text{C}_2\text{H}_4\text{O}_2$

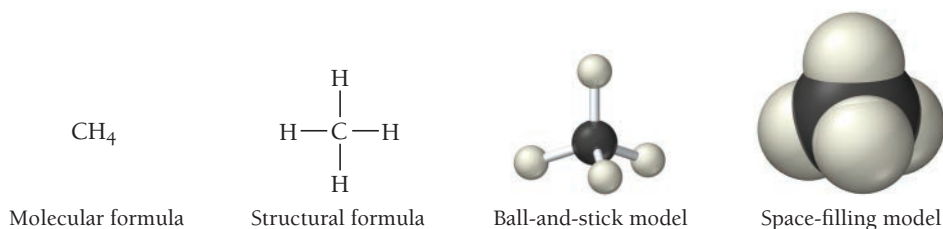


▲ A tetrahedron is a three-dimensional geometrical shape characterized by four equivalent triangular faces.

Molecular Models

A *molecular model* is a more accurate and complete way to specify a compound. A **ball-and-stick molecular model** represents atoms as balls and chemical bonds as sticks; how the two connect reflects a molecule's shape. The balls are typically color-coded to specific elements. For example, carbon is customarily black, hydrogen is white, nitrogen is blue, and oxygen is red. (For a complete list of colors of elements in the molecular models used in this book, see Appendix IIA.)

In a **space-filling molecular model**, atoms fill the space between each other to more closely represent best estimates for how a molecule might appear if scaled to visible size. Consider the following ways to represent a molecule of methane, the main component of natural gas:



The molecular formula of methane indicates the number and type of each atom in the molecule: one carbon atom and four hydrogen atoms. The structural formula indicates how the atoms are connected: The carbon atom is bonded to the four hydrogen atoms. The ball-and-stick model clearly portrays the geometry of the molecule: The carbon atom sits in the center of a *tetrahedron* formed by the four hydrogen atoms. And finally, the space-filling model gives the best sense of the relative sizes of the atoms and how they merge together in bonding.

Throughout this book, you will see molecules represented in all of these ways. As you look at these representations, keep in mind what you learned in Chapter 1: The details about a molecule—the atoms that compose it, the lengths of the bonds between atoms, the angles of the bonds between atoms, and its overall shape—determine the properties of the substance that the molecule composes. Change any of these details and those properties change. Table 4.1 shows various compounds represented in the different ways we have just discussed.



Conceptual
Connection

Representing Molecules

Based on what you learned in Chapter 1 about atoms, what part of the atom do you think the spheres in the space-filling molecular models shown on this page represent? If you were to superimpose a nucleus on one of these spheres, how big would you draw it?

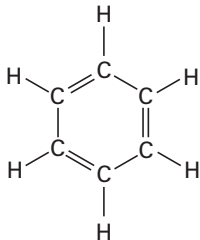
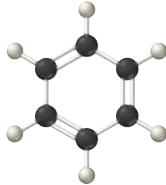



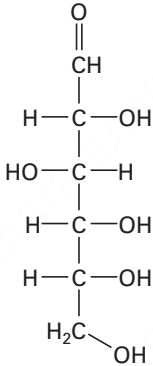
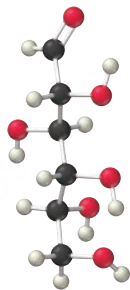
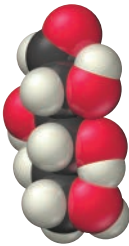
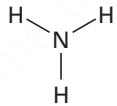




KEY CONCEPT VIDEO
The Lewis Model for
Chemical Bonding

4.4 The Lewis Model: Representing Valence Electrons with Dots

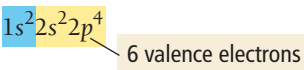
Bonding theories (or models) are central to chemistry because they explain how atoms bond together to form molecules. These theories explain why some combinations of atoms are stable and others are not. For example, bonding theories explain why table salt is NaCl and not NaCl_2 and why water is H_2O and not H_3O . Bonding theories also predict the shapes of molecules—a topic in our next chapter—which in turn determine many of the physical and chemical properties of compounds. The bonding model we introduce here is the **Lewis model**, named after the American chemist G. N. Lewis (1875–1946). In the Lewis model, we represent valence electrons as dots and we draw **Lewis electron-dot structures** (or simply **Lewis structures**) to depict molecules. These structures, which are fairly simple to draw, have tremendous predictive power. With minimal computation, we can use the Lewis model to predict whether a particular set of atoms will form a stable molecule and what that molecule might look like.

TABLE 4.1 Benzene, Acetylene, Glucose, and Ammonia

Name of Compound	Empirical Formula	Molecular Formula	Structural Formula	Ball-and-Stick Model	Space-Filling Model
Benzene	CH	C ₆ H ₆			
Acetylene	CH	C ₂ H ₂	H—C≡C—H		
Glucose	CH ₂ O	C ₆ H ₁₂ O ₆			
Ammonia	NH ₃	NH ₃			

We will also examine more advanced theories for chemical bonding in Chapter 6, but the Lewis model remains the simplest model for making quick, everyday predictions about most molecules.

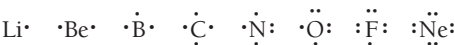
The Lewis model focuses on valence electrons because chemical bonding involves the transfer or sharing of valence electrons between two or more atoms. Recall from Chapter 3 that, for main-group elements, the valence electrons are those in the element's outermost principal energy level. In a **Lewis symbol**, we represent the valence electrons of main-group elements as dots surrounding the abbreviation for the element. For example, the electron configuration of O is:



And its Lewis symbol is:



Each dot represents a valence electron. The dots are placed around the element's symbol with a maximum of two dots per side. We draw the Lewis symbols for all of the period 2 elements in a similar way:



Remember, the number of valence electrons for any main group is equal to the group number of the element (except for helium, which is in group 8A but has only two valence electrons).

While the exact location of dots is not critical, in this book we first place dots singly before pairing (except for helium, which always has two paired dots signifying its duet).

Lewis symbols provide a simple way to visualize the number of valence electrons in a main-group atom. Notice that atoms with eight valence electrons—which are particularly stable because they have a full outer principal level—are easily identified because they have eight dots, an **octet**.

Helium is an exception. Its electron configuration and Lewis symbol are:



The Lewis symbol of helium contains only two dots (a **duet**). For helium, a duet represents a stable electron configuration because the $n = 1$ quantum level fills with only two electrons.

In the Lewis model, a chemical bond is the sharing or transfer of electrons to attain stable electron configurations for the bonding atoms. If electrons are transferred, as occurs between a metal and a nonmetal, the bond is an *ionic bond*. If the electrons are shared, as occurs between two nonmetals, the bond is a *covalent bond*. In either case, the bonding atoms obtain stable electron configurations; since the stable configuration is usually eight electrons in the outermost shell, this is known as the **octet rule**. When applying the Lewis model, we do not try to calculate the energies associated with the attractions and repulsions between electrons and nuclei on neighboring atoms. The energy changes that occur because of these interactions are central to chemical bonding (as we just discussed in Section 4.2), yet the Lewis model ignores them because calculating these energy changes is extremely complicated. Instead the Lewis model uses the simple octet rule, a practical approach that accurately predicts what we see in nature for a large number of compounds—this accounts for the success and longevity of the Lewis model.

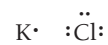
4.5 Ionic Bonding: The Lewis Model and Lattice Energies

As we have seen, ionic compounds are composed of cations (usually a metal) and anions (usually one or more nonmetals) bound together by ionic bonds. The basic unit of an ionic compound is the **formula unit**, the smallest, electrically neutral collection of ions. A formula unit is not a molecule—it does not usually exist as a discrete entity but rather as part of a larger lattice. For example, table salt, an ionic compound with the formula unit NaCl, is composed of Na^+ and Cl^- ions in a one-to-one ratio. In table salt, Na^+ and Cl^- exist in a three-dimensional alternating array. Because ionic bonds are not directional, no one Na^+ ion pairs with a specific Cl^- ion. Rather, as we saw in Figure 4.2, any one Na^+ cation is surrounded by Cl^- anions and vice versa.

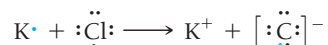
Although the Lewis model's strength is in modeling covalent bonding, we can also apply it to ionic bonding. To represent ionic bonding, we move electron dots from the Lewis symbol of the metal to the Lewis symbol of the nonmetal, so the metal becomes a cation and the nonmetal becomes an anion. This alone, however, does not account for the stability of ionic substances. To understand that stability, we must account for the formation of a crystalline lattice as a result of the attractions between the cations and anions. In this section of the chapter, we first look at the electron transfer and then examine the formation of the crystalline lattice.

Ionic Bonding and Electron Transfer

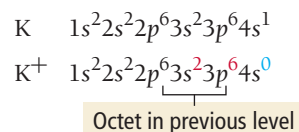
Consider potassium and chlorine, which have the following Lewis symbols:



When these atoms bond, potassium transfers its valence electron (shown here in blue) to chlorine:



The transfer of the electron gives chlorine an octet (shown as eight dots around chlorine) and leaves potassium without any valence electrons but with an octet in the *previous* principal energy level (which is now its outermost level):



Some ionic compounds, such as K_2NaPO_4 , contain more than one type of metal ion.

The potassium, having lost an electron, becomes positively charged (a cation), while the chlorine, which has gained an electron, becomes negatively charged (an anion). The Lewis symbol of an anion is usually written within brackets with the charge in the upper right-hand corner, outside the brackets. The positive and negative charges attract one another, resulting in the compound KCl.

We can use the Lewis model to predict the correct chemical formulas for ionic compounds. For the compound that forms between K and Cl, for example, the Lewis model predicts a ratio of one potassium cation to every one chloride anion, KCl. In nature, when we examine the compound formed between potassium and chlorine, we indeed find one potassium ion to every chloride ion.

As another example, consider the ionic compound formed between sodium and sulfur. The Lewis symbols for sodium and sulfur are:



Sodium must lose its one valence electron in order to have an octet (in the previous principal shell), while sulfur must gain two electrons to get an octet. Consequently, the compound that forms between sodium and sulfur requires two sodium atoms to every one sulfur atom—the formula is Na₂S. The two sodium atoms each lose their one valence electron, while the sulfur atom gains two electrons and gets an octet. The Lewis model predicts that the correct chemical formula is Na₂S, exactly what we see in nature.

EXAMPLE 4.2

Using Lewis Symbols to Predict the Chemical Formula of an Ionic Compound

Use the Lewis model to predict the formula for the compound that forms between calcium and chlorine.

SOLUTION

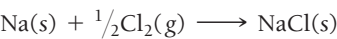
Draw Lewis symbols for calcium and chlorine based on their number of valence electrons, obtained from their group number in the periodic table.	$\cdot \text{Ca} \cdot \quad \cdot \ddot{\text{Cl}} \cdot$
Calcium needs to lose its two valence electrons (to be left with an octet in its previous principal shell), while chlorine only needs to gain one electron to get an octet. Therefore, you must have two chlorine atoms for each calcium atom. The calcium atom loses its two electrons to form Ca ²⁺ , and each chlorine atom gains an electron to form Cl [−] . In this way, both calcium and chlorine attain octets.	$\text{Ca}^{2+} \quad 2 \left[\cdot \ddot{\text{Cl}} \cdot \right]^{-}$
Finally, write the formula with subscripts to indicate the number of atoms.	CaCl ₂

FOR PRACTICE 4.2

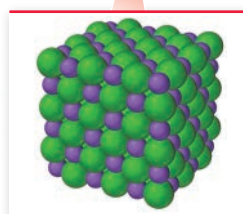
Use the Lewis model to predict the formula for the compound that forms between magnesium and nitrogen.

Lattice Energy: The Rest of the Story

The formation of an ionic compound from its constituent elements usually gives off quite a bit of energy as heat (the process is exothermic; see Section E.6). For example, when one mole of sodium chloride forms from elemental sodium and chlorine, 411 kJ of heat is evolved in the following violent reaction:

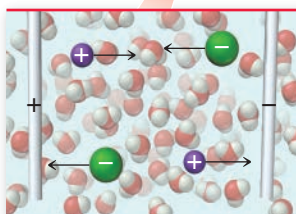


Where does this energy come from? You might think that it comes solely from the tendency of metals to lose electrons and nonmetals to gain electrons—but it does not. In fact, the transfer of an electron from sodium to chlorine—by itself—actually *absorbs* energy. The first ionization energy of sodium is +496 kJ/mol, and the electron affinity of Cl is only −349 kJ/mol. (Recall from Section E.6 that the positive sign indicates the absorption of energy and the negative sign indicates the emission of energy.) Based only on these energies, the reaction should absorb +147 kJ/mol. So why is the reaction so *exothermic*?



NaCl(s)

▲ Solid sodium chloride does not conduct electricity.



NaCl(aq)

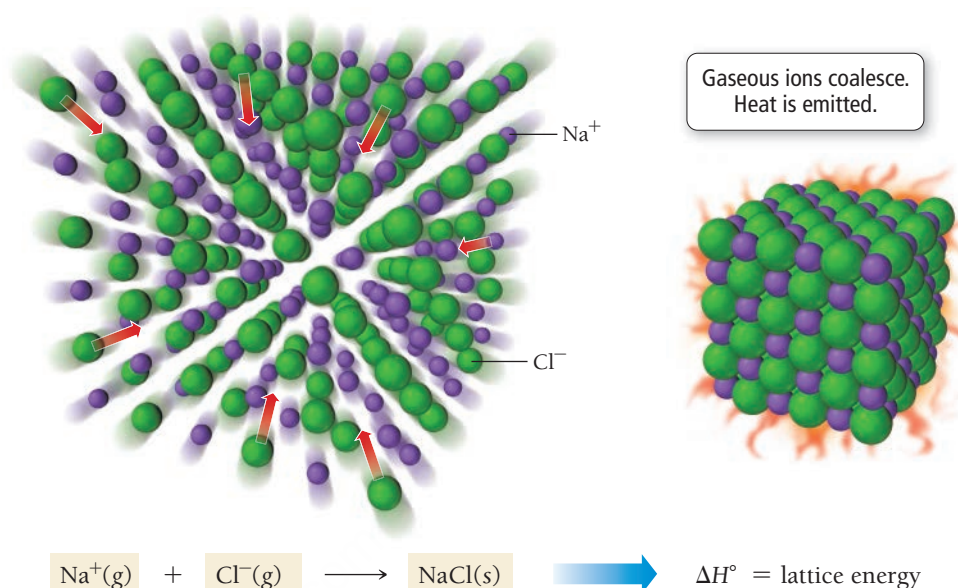
▲ When sodium chloride dissolves in water, the resulting solution contains mobile ions that can create an electric current.



4.3
Cc

Conceptual
Connection

Lattice Energy of an Ionic Compound



▲ **FIGURE 4.5 Lattice Energy** The lattice energy of an ionic compound is the energy associated with the formation of a crystalline lattice of the compound from the gaseous ions.

The answer lies in the **lattice energy**—the energy associated with the formation of a crystalline lattice of alternating cations and anions from the gaseous ions. Since the sodium ions are positively charged and the chlorine ions are negatively charged, the potential energy decreases—as described by Coulomb's law—when these ions come together to form a lattice. That energy is emitted as heat when the lattice forms, as illustrated in **Figure 4.5** ▲. The exact value of the lattice energy, however, is not simple to determine because it involves a large number of interactions among many charged particles in a lattice. The easiest way to calculate lattice energy is with the *Born–Haber cycle*, which we will discuss in Section 9.11.

Ionic Bonding: Models and Reality

In this section, we applied the Lewis model to ionic bonding. The value of a model lies in how well it accounts for what we see in nature (through experiments). Does this ionic bonding model explain the properties of ionic compounds, including their high melting and boiling points, their tendency *not to conduct* electricity as solids, and their tendency *to conduct* electricity when dissolved in water?

We model an ionic solid as a lattice of individual ions held together by coulombic forces that are not directional (which means that, as we move away from the center of an ion, the forces are equally strong in all directions). To melt the solid, these forces must be overcome, which requires a significant amount of heat. Therefore, our model accounts for the high melting points of ionic solids. In the model, electrons transfer from the metal to the nonmetal, but the transferred electrons remain localized on one atom. In other words, our model does not include any free electrons that might conduct electricity (the movement or flow of electrons in response to an electric potential, or voltage, is electrical current). In addition, the ions themselves are fixed in place; therefore, our model accounts for the nonconductivity of ionic solids. When our idealized ionic solid dissolves in water, however, the cations and anions dissociate, forming free ions in solution. These ions can move in response to electrical forces, creating an electrical current. Thus, our model predicts that solutions of ionic compounds conduct electricity (which in fact they do).

Melting Points of Ionic Solids

Use the ionic bonding model developed in this section to determine which has the higher melting point, NaCl or MgO. Explain your answer.

4.6 Ionic Compounds: Formulas and Names

KEY CONCEPT VIDEO
Naming Ionic Compounds



In Section 4.5, we deduced the formula for a simple ionic compound from the Lewis symbols of its constituent atoms. Because ionic compounds must be charge-neutral, we can also deduce the formula from the charges of the ions. In this section, we examine how to write a formula for an ionic compound based on the charges of the constituent ions and how to systematically name ionic compounds. The process of naming compounds is called *nomenclature*.

Writing Formulas for Ionic Compounds

Because ionic compounds are charge-neutral and because many elements form only one type of ion with a predictable charge (see Figure 3.12), we can deduce the formulas for many ionic compounds from their constituent elements. For example, we know that the formula for the ionic compound composed of potassium and fluorine must be KF because, in compounds, K always forms 1+ cations and F always forms 1− anions. In order for the compound to be charge-neutral, it must contain one K⁺ cation to every one F[−] anion. The formula for the ionic compound composed of *magnesium* and fluorine, in contrast, is MgF₂ because Mg always forms 2+ cations and F always forms 1− anions. In order for this compound to be charge-neutral, it must contain one Mg²⁺ cation for every two F[−] anions.

Summarizing Ionic Compound Formulas:

- Ionic compounds always contain positive and negative ions.
- In a chemical formula, the sum of the charges of the positive ions (cations) must equal the sum of the charges of the negative ions (anions).
- The formula of an ionic compound reflects the smallest whole-number ratio of ions.

To write the formula for an ionic compound, follow the procedure in the left column in the following examples. Examples of how to apply the procedure are provided in the center and right columns.

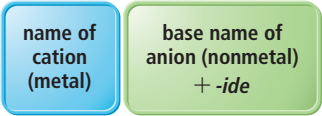
Interactive
Worked Example
Video 4.3



EXAMPLE 4.3			EXAMPLE 4.4		
Writing Formulas for Ionic Compounds			Writing Formulas for Ionic Compounds		
PROCEDURE FOR Writing Formulas for Ionic Compounds	Write the formula for the ionic compound that forms between aluminum and oxygen.		Write the formula for the ionic compound that forms between calcium and oxygen.		
	<div>Al³⁺ O^{2−}</div>		<div>Ca²⁺ O^{2−}</div>		
	<div><div>Al³⁺ O^{2−}</div><div>↓</div><div>Al₂O₃</div></div>		<div><div>Ca²⁺ O^{2−}</div><div>↓</div><div>CaO</div></div>		
	cations: 2(3+) = 6+ anions: 3(2−) = 6− The charges cancel.		cations: 2+ anions: 2− The charges cancel.		
	FOR PRACTICE 4.3 Write the formula for the compound formed between potassium and sulfur.		FOR PRACTICE 4.4 Write the formula for the compound formed between aluminum and nitrogen.		

Naming Binary Ionic Compounds Containing a Metal That Forms Only One Type of Cation

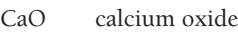
Binary compounds contain only two different elements. The names of binary ionic compounds take the form:



For example, the name for KCl consists of the name of the cation, *potassium*, followed by the base name of the anion, *chlor*, with the ending *-ide*. Its full name is *potassium chloride*:



The name for CaO consists of the name of the cation, *calcium*, followed by the base name of the anion, *ox*, with the ending *-ide*. Its full name is *calcium oxide*:



The base names for various nonmetals and their most common charges in ionic compounds are shown in Table 4.2.

TABLE 4.2 Some Common Monoatomic Anions

Nonmetal	Symbol for Ion	Base Name	Anion Name
Fluorine	F [−]	Fluor	Fluoride
Chlorine	Cl [−]	Chlor	Chloride
Bromine	Br [−]	Brom	Bromide
Iodine	I [−]	Iod	Iodide
Oxygen	O ^{2−}	Ox	Oxide
Sulfur	S ^{2−}	Sulf	Sulfide
Nitrogen	N ^{3−}	Nitr	Nitride
Phosphorus	P ^{3−}	Phosph	Phosphide

EXAMPLE 4.5

Naming Ionic Compounds Containing a Metal That Forms Only One Type of Cation

Name the compound CaBr₂.

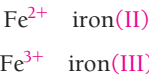
SOLUTION
The cation is *calcium*. The anion is from bromine, which becomes *bromide*. The correct name is *calcium bromide*.

FOR PRACTICE 4.5
Name the compound Ag₃N.

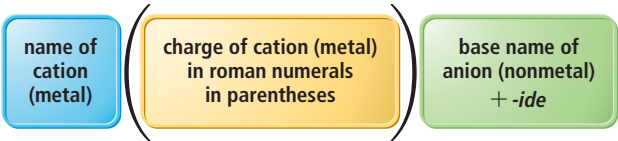
FOR MORE PRACTICE 4.5
Write the formula for rubidium sulfide.

Naming Binary Ionic Compounds Containing a Metal That Forms More Than One Type of Cation

For these metals, the name of the cation is followed by a roman numeral (in parentheses), which indicates the charge of the metal in that particular compound. For example, we distinguish between Fe²⁺ and Fe³⁺ as follows:



The full names for compounds containing metals that form more than one kind of cation have the form:



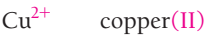
We can determine the charge of the metal cation by inference from the sum of the charges of the nonmetal anions—remember that the sum of all the charges in the compound must be zero. Table 4.3 shows some of the metals that form more than one type of cation and their most common charges. For example, in CrBr₃, the charge of chromium must be 3+ in order for the compound to be charge-neutral with three Br[−] anions. The cation is named:



Note that there is no space between the name of the cation and the parenthetical number indicating its charge.

The full name of the compound is:
 CrBr_3 chromium(III) bromide

Similarly, in CuO , the charge of copper must be $2+$ in order for the compound to be charge-neutral with one O^{2-} anion. The cation is therefore:



The full name of the compound is:
 CuO copper(II) oxide

TABLE 4.3 Some Metals That Form Cations with Different Charges

Metal	Ion	Name	Older Name*
Chromium	Cr^{2+}	Chromium(II)	Chromous
	Cr^{3+}	Chromium(III)	Chromic
Iron	Fe^{2+}	Iron(II)	Ferrous
	Fe^{3+}	Iron(III)	Ferric
Cobalt	Co^{2+}	Cobalt(II)	Cobaltous
	Co^{3+}	Cobalt(III)	Cobaltic
Copper	Cu^{+}	Copper(I)	Cuprous
	Cu^{2+}	Copper(II)	Cupric
Tin	Sn^{2+}	Tin(II)	Stannous
	Sn^{4+}	Tin(IV)	Stannic
Mercury	Hg_2^{2+}	Mercury(I)	Mercurous
	Hg^{2+}	Mercury(II)	Mercuric
Lead	Pb^{2+}	Lead(II)	Plumbous
	Pb^{4+}	Lead(IV)	Plumbic

*An older naming system substitutes the names found in this column for the name of the metal and its charge. Under this system, chromium(II) oxide is named chromous oxide. In this system, the suffix *-ous* indicates the ion with the lesser charge, and *-ic* indicates the ion with the greater charge. We will *not* use the older system in this text.

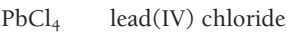
EXAMPLE 4.6

Naming Ionic Compounds Containing a Metal That Forms More Than One Type of Cation

Name the compound PbCl_4 .

SOLUTION

The charge on Pb must be $4+$ for the compound to be charge-neutral with 4 Cl^- anions. The name for PbCl_4 is the name of the cation, *lead*, followed by the charge of the cation in parentheses (IV), and the base name of the anion, *chlor*, with the ending *-ide*. The full name is *lead(IV) chloride*.



FOR PRACTICE 4.6

Name the compound FeS .

FOR MORE PRACTICE 4.6

Write the formula for ruthenium(IV) oxide.

Naming Ionic Compounds Containing Polyatomic Ions

Many common ionic compounds contain ions that are themselves composed of a group of covalently bonded atoms with an overall charge. For example, the active ingredient in household bleach is sodium hypochlorite, which acts to chemically alter color-causing molecules in clothes (bleaching action) and to kill bacteria (disinfection). Hypochlorite is a **polyatomic ion**—an ion composed of two or more atoms—with the formula ClO^- . Note that the charge on the hypochlorite ion is a property of the whole ion, not just the oxygen atom; this is true for all polyatomic ions. The hypochlorite ion is a unit in other compounds as well (such as KClO and $\text{Mg}(\text{ClO})_2$). Other common compounds that contain polyatomic ions include sodium bicarbonate (NaHCO_3), also known as baking soda, sodium nitrite (NaNO_2), an inhibitor of bacterial growth in packaged meats, and calcium carbonate (CaCO_3), the active ingredient in antacids such as Tums™.

Polyatomic Ions

4.4

Cc

Conceptual Connection



Identify the polyatomic ion and its charge in each compound.

- (a) KNO_2
- (b) CaSO_4
- (c) $\text{Mg}(\text{NO}_3)_2$

We name ionic compounds that contain a polyatomic ion in the same way that we name other ionic compounds, except that we incorporate the name of the polyatomic ion whenever it occurs. Table 4.4 lists common polyatomic ions and their formulas. For example, NaNO_2 is named according to its cation, Na^+ , *sodium*, and its polyatomic anion, NO_2^- , *nitrite*. Its full name is *sodium nitrite*.



We name FeSO_4 according to its cation, *iron*, its charge (*II*), and its polyatomic ion *sulfate*. Its full name is *iron(II) sulfate*.



If the compound contains both a polyatomic cation and a polyatomic anion, we use the names of both polyatomic ions. For example, NH_4NO_3 is *ammonium nitrate*.




TABLE 4.4 Some Common Polyatomic Ions

Name	Formula	Name	Formula
Acetate	$\text{C}_2\text{H}_3\text{O}_2^-$	Hypochlorite	ClO^-
Carbonate	CO_3^{2-}	Chlorite	ClO_2^-
Hydrogen carbonate (or bicarbonate)	HCO_3^-	Chlorate	ClO_3^-
Hydroxide	OH^-	Perchlorate	ClO_4^-
Nitrite	NO_2^-	Permanganate	MnO_4^-
Nitrate	NO_3^-	Sulfite	SO_3^{2-}
Chromate	CrO_4^{2-}	Hydrogen sulfite (or bisulfite)	HSO_3^-
Dichromate	$\text{Cr}_2\text{O}_7^{2-}$	Sulfate	SO_4^{2-}
Phosphate	PO_4^{3-}	Hydrogen sulfate (or bisulfate)	HSO_4^-
Hydrogen phosphate	HPO_4^{2-}	Cyanide	CN^-
Dihydrogen phosphate	H_2PO_4^-	Peroxide	O_2^{2-}
Ammonium	NH_4^+		




▲ Polyatomic ions are common in household products such as bleach, which contains sodium hypochlorite (NaClO).

You should be able to recognize polyatomic ions in a chemical formula, so become familiar with the ions listed in Table 4.4. Most common polyatomic ions are **oxyanions**, anions containing oxygen and another element. Notice that when a series of oxyanions contains different numbers of oxygen atoms, we name them systematically according to the number of oxygen atoms in the ion. If there are only two ions in the series, the one with more oxygen atoms has the ending *-ate* and the one with fewer oxygen atoms has the ending *-ite*. For example, NO_3^- is *nitrate* and NO_2^- is *nitrite*.



If there are more than two ions in the series, we use the prefixes *hypo-*, meaning *less than*, and *per-*, meaning *more than*. So ClO^- is hypochlorite—less oxygen than chlorite, and ClO_4^- is perchlorate—more oxygen than chlorate.



Other halides (halogen ions) form similar series with similar names. Thus, IO_3^- is called iodate and BrO_3^- is called bromate.

EXAMPLE 4.7

Naming Ionic Compounds That Contain a Polyatomic Ion

Name the compound $\text{Li}_2\text{Cr}_2\text{O}_7$.

SOLUTION

The name for $\text{Li}_2\text{Cr}_2\text{O}_7$ is the name of the cation, *lithium*, followed by the name of the polyatomic ion, *dichromate*. Its full name is *lithium dichromate*.




FOR PRACTICE 4.7

Name the compound $\text{Sn}(\text{ClO}_3)_2$.

FOR MORE PRACTICE 4.7

Write the formula for cobalt(II) phosphate.



▲ FIGURE 4.8 Hydrates Cobalt(II) chloride hexahydrate is pink. Heating the compound removes the waters of hydration, leaving the bluish/purple anhydrous cobalt(II) chloride.

Common hydrate prefixes

hemi = $\frac{1}{2}$

mono = 1

di = 2

tri = 3

tetra = 4

penta = 5

hexa = 6

hepta = 7

octa = 8

Hydrated Ionic Compounds

Some ionic compounds—called **hydrates**—contain a specific number of water molecules associated with each formula unit. For example, the formula for Epsom salts is $\text{MgSO}_4 \cdot 7\text{H}_2\text{O}$, and its systematic name is magnesium sulfate heptahydrate. The seven H_2O molecules associated with the formula unit are *waters of hydration*. Waters of hydration can usually be removed by heating the compound.

Figure 4.8 ◀ shows a sample of cobalt(II) chloride hexahydrate ($\text{CoCl}_2 \cdot 6\text{H}_2\text{O}$) before and after heating. The hydrate is pink and the anhydrous salt (the salt without any associated water molecules) is bluish/purple. We name hydrates like we name other ionic compounds, but we give them the additional name “*prefixhydrate*,” where the *prefix* indicates the number of water molecules associated with each formula unit.

Other common hydrated ionic compounds and their names are as follows:



Notice from Figure 4.9 that hydrogen also exists as a diatomic element. Similar to chlorine, the Lewis symbol for hydrogen has one unpaired electron.



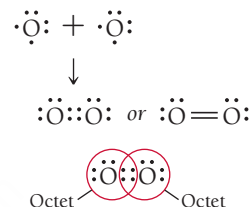
When two hydrogen atoms share their unpaired electron, each gets a duet, a stable configuration for hydrogen.



Again, the Lewis model helps us explain what we see in nature.

Double and Triple Covalent Bonds

In the Lewis model, two atoms may share more than one electron pair to get octets. For example, if we pair two oxygen atoms together, they share two electron pairs.

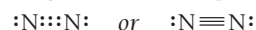


One dash always stands for two electrons (a single bonding pair).

We will explore the characteristics of multiple bonds more fully in Section 6.3.

Each oxygen atom now has an octet because *the additional bonding pair counts toward the octet of both oxygen atoms*. When two atoms share two electron pairs, the resulting bond is a **double bond**. In general, double bonds are shorter and stronger than single bonds. The double bond that forms between two oxygen atoms explains why oxygen exists as a diatomic molecule.

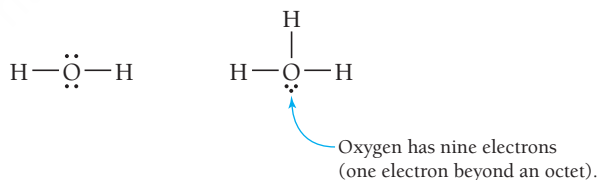
Atoms can also share three electron pairs. Consider the Lewis structure of another diatomic molecule, N_2 . Because each N atom has five valence electrons, the Lewis structure for N_2 has 10 electrons. Both nitrogen atoms attain octets by sharing three electron pairs:



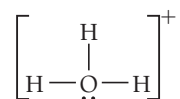
In this case, the bond is a **triple bond**. Triple bonds are even shorter and stronger than double bonds. When we examine nitrogen in nature, we find that it exists as a diatomic molecule with a very strong bond between the two nitrogen atoms. The bond is so strong that it is difficult to break, making N_2 a relatively unreactive molecule.

Covalent Bonding: Models and Reality

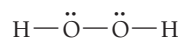
The Lewis model predicts the properties of molecular compounds in many ways. We have already seen how it explains the existence of several diatomic elements. The Lewis model also accounts for why particular combinations of atoms form molecules and others do not. For example, why is water H_2O and not H_3O ? We can write a good Lewis structure for H_2O but not for H_3O .



In this way, the Lewis model predicts that H_2O should be stable, while H_3O should not be, and that is in fact the case. However, if we remove an electron from H_3O , we get H_3O^+ , which should be stable (according to the Lewis model) because, when we remove the extra electron, oxygen gets an octet.

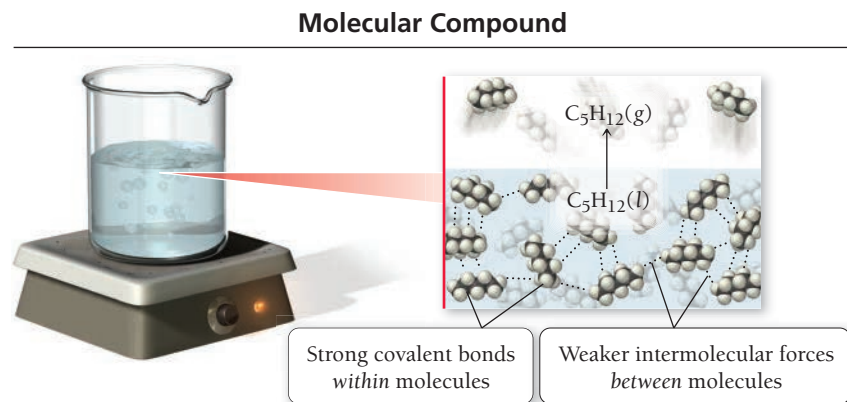


This ion, called the hydronium ion, is in fact stable in aqueous solutions (see Section 8.7). The Lewis model predicts other possible combinations for hydrogen and oxygen as well. For example, we can write a Lewis structure for H_2O_2 as follows:



Indeed, H_2O_2 , or hydrogen peroxide, exists and is often used as a disinfectant and a bleach.

The Lewis model also accounts for why covalent bonds are highly *directional*. The attraction between two covalently bonded atoms is due to the sharing of one or more electron pairs in the space between them. Thus, each bond links just one specific pair of atoms—in contrast to ionic bonds, which are *nondirectional* and hold together an entire array of ions. As a result, the fundamental units of covalently bonded compounds are individual molecules. These molecules can interact with one another in a number of different ways that we will cover in Chapter 11. However, in covalently bonded molecular compounds, the interactions *between* molecules (intermolecular forces) are generally much weaker than the bonding interactions within a molecule (intramolecular forces), as shown in **Figure 4.10** ▶. When a molecular compound melts or boils, the molecules themselves remain intact—only the relatively weak interactions between molecules must be overcome. Consequently, molecular compounds tend to have lower melting and boiling points than ionic compounds.



▲ **FIGURE 4.10 Intermolecular and Intramolecular Forces** The covalent bonds between atoms of a molecule are much stronger than the interactions between molecules. To bring a molecular substance to a boil, only the relatively weak intermolecular forces have to be overcome, so molecular compounds often have low boiling points.

Energy and the Octet Rule

What is wrong with the following statement? *Atoms form bonds in order to satisfy the octet rule.*

4.5

Cc

Conceptual
Connection

Ionic and Molecular Compounds

Which statement best summarizes the difference between ionic and molecular compounds?

- Molecular compounds contain highly directional covalent bonds, which result in the formation of molecules—discrete particles that do not covalently bond to each other. Ionic compounds contain nondirectional ionic bonds, which result (in the solid phase) in the formation of ionic lattices—extended networks of alternating cations and anions.
- Molecular compounds contain covalent bonds in which one of the atoms shares an electron with the other one, resulting in a new force that holds the atoms together in a covalent molecule. Ionic compounds contain ionic bonds in which one atom donates an electron to the other, resulting in a new force that holds the ions together in pairs (in the solid phase).
- The key difference between ionic and covalent compounds is the types of elements that compose them, not the way that the atoms bond together.
- A molecular compound is composed of covalently bonded molecules. An ionic compound is composed of ionically bonded molecules (in the solid phase).

4.6

Cc

Conceptual
Connection

4.8 Molecular Compounds: Formulas and Names

In contrast to an ionic compound, the formula for a molecular compound *cannot* always be determined from its constituent elements because the same combination of elements may form several different molecular compounds, each with a different formula. We just saw in Section 4.7 that hydrogen and oxygen can form both H_2O and H_2O_2 and each of these formulas is explained by its Lewis structure. Carbon and oxygen can form both CO and CO_2 , and nitrogen and oxygen can form NO , NO_2 , N_2O , N_2O_3 , N_2O_4 , and N_2O_5 . In Chapter 5 we will discuss how to draw Lewis structures for compounds such as these. For now, we focus on naming a molecular compound based on its formula and writing its formula based on its name.

Like ionic compounds, many molecular compounds have common names. For example, H_2O and NH_3 have the common names *water* and *ammonia*. However, the sheer number of existing molecular compounds—numbering in the millions—necessitates a systematic approach to naming them.



KEY CONCEPT VIDEO
**Naming Molecular
Compounds**

The first step in naming a molecular compound is identifying it as one. Remember, *molecular compounds are composed of two or more nonmetals*. In this section, we learn how to name binary (two-element) molecular compounds. Their names have the form:



When we write the name of a molecular compound, just as when we write its formula, the first element is the more metal-like one (toward the left and bottom of the periodic table). Generally, we write the name of the element with the smallest group number first. If the two elements lie in the same group, we write the element with the greatest row number first. The prefixes given to each element indicate the number of atoms present:

mono = 1	tri = 3	penta = 5	hepta = 7	nona = 9
di = 2	tetra = 4	hexa = 6	octa = 8	deca = 10

These prefixes are the same ones we use when naming hydrates.

If there is only one atom of the *first element* in the formula, we normally omit the prefix *mono-*. For example, we name NO_2 according to the first element, *nitrogen*, with no prefix because *mono-* is omitted for the first element, followed by the prefix *di-*, to indicate two oxygen atoms, and the base name of the second element, *ox*, with the ending *-ide*. Its full name is *nitrogen dioxide*.



We name the compound N_2O (sometimes called laughing gas) similarly except that we use the prefix *di-* before nitrogen to indicate two nitrogen atoms and the prefix *mono-* before oxide to indicate one oxygen atom. Its full name is *dinitrogen monoxide*.



When a prefix ends with "o" and the base name begins with "o," the first "o" is often dropped. So mono-oxide becomes *monoxide*.

EXAMPLE 4.8

Naming Molecular Compounds

Name each compound.



SOLUTION

- (a) The name of the compound is the name of the first element, *nitrogen*, followed by the base name of the second element, *iod*, prefixed by *tri-* to indicate three and given the suffix *-ide*.



- (b) The name of the compound is the name of the first element, *phosphorus*, followed by the base name of the second element, *chlor*, prefixed by *penta-* to indicate five and given the suffix *-ide*.



- (c) The name of the compound is the name of the first element, *phosphorus*, prefixed by *tetra-* to indicate four, followed by the base name of the second element, *sulf*, prefixed by *deca-* to indicate ten and given the suffix *-ide*.



FOR PRACTICE 4.8

Name the compound N_2O_5 .

FOR MORE PRACTICE 4.8

Write the formula for phosphorus tribromide.

Nomenclature

4.7

Cc

Conceptual
Connection

The compound NCl_3 is nitrogen trichloride, but AlCl_3 is simply aluminum chloride. Why?

4.9 Formula Mass and the Mole Concept for Compounds

We have now discussed how to name compounds and write formulas for them. It is also useful to be able to quantify the mass of a compound. In Chapter 1, we defined the average mass of an atom of an element as its *atomic mass*. Similarly, we now define the average mass of a molecule (or a formula unit) of a compound as its **formula mass**. (The terms *molecular mass* or *molecular weight* are synonymous with formula mass and are also common.) For any compound, the formula mass is the sum of the atomic masses of all the atoms in its chemical formula.

$$\text{formula mass} = \left(\begin{array}{c} \text{number of atoms} \\ \text{of 1st element in} \\ \text{chemical formula} \end{array} \times \begin{array}{c} \text{atomic mass} \\ \text{of} \\ \text{1st element} \end{array} \right) + \left(\begin{array}{c} \text{number of atoms} \\ \text{of 2nd element in} \\ \text{chemical formula} \end{array} \times \begin{array}{c} \text{atomic mass} \\ \text{of} \\ \text{2nd element} \end{array} \right) + \dots$$

For example, the formula mass of carbon dioxide, CO_2 , is:

Multiply by 2 because formula has 2 oxygen atoms.

$$\begin{aligned} \text{formula mass} &= 12.01 \text{ amu} + 2(16.00 \text{ amu}) \\ &= 44.01 \text{ amu} \end{aligned}$$

and that of sodium oxide, Na_2O , is:

Multiply by 2 because formula has 2 sodium atoms.

$$\begin{aligned} \text{formula mass} &= 2(22.99 \text{ amu}) + 16.00 \text{ amu} \\ &= 61.98 \text{ amu} \end{aligned}$$

EXAMPLE 4.9

Calculating Formula Mass

Calculate the formula mass of glucose, $\text{C}_6\text{H}_{12}\text{O}_6$.

SOLUTION

To find the formula mass, add the atomic masses of each atom in the chemical formula.

$$\begin{aligned} \text{formula mass} &= 6 \times (\text{atomic mass C}) + 12 \times (\text{atomic mass H}) + 6 \times (\text{atomic mass O}) \\ &= 6(12.01 \text{ amu}) + 12(1.008 \text{ amu}) + 6(16.00 \text{ amu}) \\ &= 180.16 \text{ amu} \end{aligned}$$

FOR PRACTICE 4.9

Calculate the formula mass of calcium nitrate.

Molar Mass of a Compound

Recall from Section 1.10 that an element's molar mass—the mass in grams of one mole of its atoms—is numerically equivalent to its atomic mass. We use the molar mass in combination with Avogadro's number to determine the number of atoms in a given mass of the element. The same concept applies to compounds. The *molar mass of a compound*—the mass in grams of 1 mol of its molecules or formula units—is

Remember, ionic compounds do not contain individual molecules. In casual language, the smallest electrically neutral collection of ions is sometimes called a molecule but is more correctly called a formula unit.

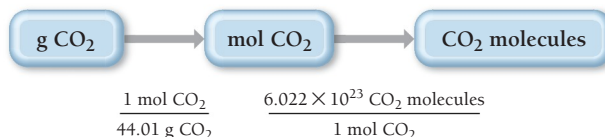
numerically equivalent to its formula mass. For example, we just calculated the formula mass of CO_2 to be 44.01 amu. The molar mass is, therefore:

$$\text{CO}_2 \text{ molar mass} = 44.01 \text{ g/mol}$$

Using Molar Mass to Count Molecules by Weighing

The molar mass of CO_2 is a conversion factor between mass (in grams) and amount (in moles) of CO_2 . Suppose we want to find the number of CO_2 molecules in a sample of dry ice (solid CO_2) with a mass of 10.8 g. This calculation is analogous to Example 1.7, where we found the number of atoms in a sample of copper of a given mass. We begin with the mass of 10.8 g and use the molar mass to convert to the amount in moles. Then we use Avogadro's number to convert to number of molecules. The conceptual plan shows the progression.

Conceptual Plan



To solve the problem, we follow the conceptual plan, beginning with 10.8 grams CO_2 , converting to moles, and then to molecules.

Solution

$$10.8 \text{ g CO}_2 \times \frac{1 \text{ mol CO}_2}{44.01 \text{ g CO}_2} \times \frac{6.022 \times 10^{23} \text{ CO}_2 \text{ molecules}}{1 \text{ mol CO}_2} = 1.48 \times 10^{23} \text{ CO}_2 \text{ molecules}$$

EXAMPLE 4.10

The Mole Concept—Converting between Mass and Number of Molecules

Interactive
Worked Example
Video 4.10

PEARSON
eText
2.0

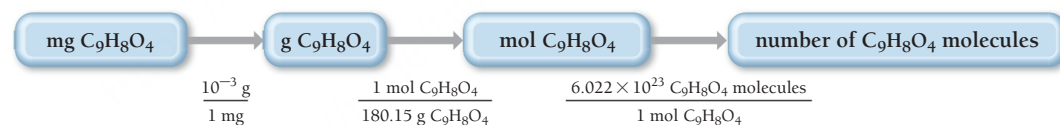
An aspirin tablet contains 325 mg of acetylsalicylic acid ($\text{C}_9\text{H}_8\text{O}_4$). How many acetylsalicylic acid molecules does it contain?

SORT You are given the mass of acetylsalicylic acid and asked to find the number of molecules.

GIVEN: 325 mg $\text{C}_9\text{H}_8\text{O}_4$
FIND: number of $\text{C}_9\text{H}_8\text{O}_4$ molecules

STRATEGIZE First convert to grams and then to moles (using the molar mass of the compound) and then to number of molecules (using Avogadro's number). You need both the molar mass of acetylsalicylic acid and Avogadro's number as conversion factors. You also need the conversion factor between g and mg.

CONCEPTUAL PLAN



RELATIONSHIPS USED

$$\text{C}_9\text{H}_8\text{O}_4 \text{ molar mass} = 9(12.01) + 8(1.008) + 4(16.00) = 180.15 \text{ g/mol}$$

$$6.022 \times 10^{23} = 1 \text{ mol}$$

$$1 \text{ mg} = 10^{-3} \text{ g}$$

SOLVE Follow the conceptual plan to solve the problem.

SOLUTION

$$325 \text{ mg C}_9\text{H}_8\text{O}_4 \times \frac{10^{-3} \text{ g}}{1 \text{ mg}} \times \frac{1 \text{ mol C}_9\text{H}_8\text{O}_4}{180.15 \text{ g C}_9\text{H}_8\text{O}_4} \times \frac{6.022 \times 10^{23} \text{ C}_9\text{H}_8\text{O}_4 \text{ molecules}}{1 \text{ mol C}_9\text{H}_8\text{O}_4} = 1.09 \times 10^{21} \text{ C}_9\text{H}_8\text{O}_4 \text{ molecules}$$

CHECK The units of the answer, $\text{C}_9\text{H}_8\text{O}_4$ molecules, are correct. The magnitude is smaller than Avogadro's number, as expected, since you have less than one molar mass of acetylsalicylic acid.

FOR PRACTICE 4.10

Find the number of ibuprofen molecules in a tablet containing 200.0 mg of ibuprofen ($\text{C}_{13}\text{H}_{18}\text{O}_2$).

FOR MORE PRACTICE 4.10

What is the mass of a sample of water containing 3.55×10^{22} H_2O molecules?

Molecular Models and the Size of Molecules

Throughout this book, we use space-filling molecular models to represent molecules. Which number is the best estimate for the scaling factor used in these models? In other words, by approximately what number would you have to multiply the radius of an actual oxygen atom for it to be the radius of the sphere used to represent the oxygen atom in the water molecule shown here?

- (a) 10 (b) 10^4 (c) 10^8 (d) 10^{16}



4.8
Cc

Conceptual
Connection



4.10 Composition of Compounds

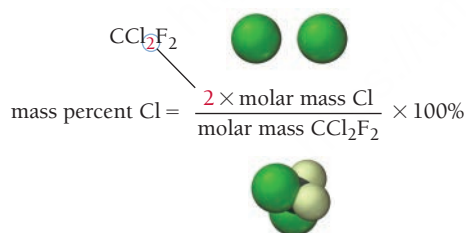
A chemical formula, in combination with the molar masses of its constituent elements, indicates the relative quantities of each element in a compound, which is extremely useful information. For example, about 35 years ago, scientists began to suspect that synthetic compounds known as chlorofluorocarbons (CFCs) were destroying ozone (O_3) in Earth's upper atmosphere. Upper atmospheric ozone is important because it acts as a shield, protecting life on Earth from the sun's harmful ultraviolet light.

CFCs are chemically inert compounds used primarily as refrigerants and industrial solvents. Over time CFCs have accumulated in the atmosphere. In the upper atmosphere, sunlight breaks bonds within CFCs, releasing chlorine atoms. The chlorine atoms then react with ozone, converting the ozone into O_2 . So the harmful part of CFCs is the chlorine atoms that they carry. How can we determine the mass of chlorine in a given mass of a CFC?

One way to express how much of an element is in a given compound is to use the element's mass percent composition for that compound. The **mass percent composition** or **mass percent** of an element is that element's percentage of the compound's total mass. We calculate the mass percent of element X in a compound from the chemical formula as follows:

$$\text{mass percent of element X} = \frac{\text{mass of element X in 1 mol of compound}}{\text{mass of 1 mol of the compound}} \times 100\%$$

Suppose, for example, that we want to calculate the mass percent composition of Cl in the chlorofluorocarbon CCl_2F_2 . The mass percent Cl is given by:

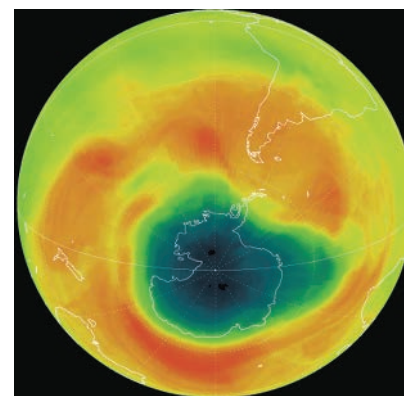


We multiply the molar mass of Cl by two because the chemical formula has a subscript of 2 for Cl, indicating that 1 mol of CCl_2F_2 contains 2 mol of Cl atoms. We calculate the molar mass of CCl_2F_2 as follows:

$$\begin{aligned} \text{molar mass} &= 12.01 \text{ g/mol} + 2(35.45 \text{ g/mol}) + 2(19.00 \text{ g/mol}) \\ &= 120.91 \text{ g/mol} \end{aligned}$$

So the mass percent of Cl in CCl_2F_2 is:

$$\begin{aligned} \text{mass percent Cl} &= \frac{2 \times \text{molar mass Cl}}{\text{molar mass } CCl_2F_2} \times 100\% \\ &= \frac{2 \times 35.45 \text{ g/mol}}{120.91 \text{ g/mol}} \times 100\% \\ &= 58.64\% \end{aligned}$$



▲ The chlorine in chlorofluorocarbons caused the ozone hole over Antarctica. The dark blue color indicates depressed ozone levels.

EXAMPLE 4.11

Mass Percent Composition

Calculate the mass percent of Cl in Freon-112 ($\text{C}_2\text{Cl}_4\text{F}_2$), a CFC refrigerant.

SORT You are given the molecular formula of freon-112 and asked to find the mass percent of Cl.

GIVEN: $\text{C}_2\text{Cl}_4\text{F}_2$
FIND: mass percent Cl

STRATEGIZE The molecular formula tells you that there are 4 mol of Cl in each mole of Freon-112. Find the mass percent composition from the chemical formula by using the equation that defines mass percent. The conceptual plan shows how to use the mass of Cl in 1 mol of $\text{C}_2\text{Cl}_4\text{F}_2$ and the molar mass of $\text{C}_2\text{Cl}_4\text{F}_2$ to find the mass percent of Cl.

CONCEPTUAL PLAN

$$\text{mass \% Cl} = \frac{4 \times \text{molar mass Cl}}{\text{molar mass } \text{C}_2\text{Cl}_4\text{F}_2} \times 100\%$$

RELATIONSHIPS USED

$$\text{mass percent of element X} = \frac{\text{mass of element X in 1 mol of compound}}{\text{mass of 1 mol of compound}} \times 100\%$$

SOLVE Calculate the necessary parts of the equation and substitute the values into the equation to find mass percent Cl.

SOLUTION

$$\begin{aligned} 4 \times \text{molar mass Cl} &= 4(35.45 \text{ g/mol}) = 141.8 \text{ g/mol} \\ \text{molar mass } \text{C}_2\text{Cl}_4\text{F}_2 &= 2(12.01 \text{ g/mol}) + 4(35.45 \text{ g/mol}) + 2(19.00 \text{ g/mol}) \\ &= 24.02 \text{ g/mol} + 141.8 \text{ g/mol} + 38.00 \text{ g/mol} = 203.8 \text{ g/mol} \\ \text{mass \% Cl} &= \frac{4 \times \text{molar mass Cl}}{\text{molar mass } \text{C}_2\text{Cl}_4\text{F}_2} \times 100\% = \frac{141.8 \text{ g/mol}}{203.8 \text{ g/mol}} \times 100\% = 69.58\% \end{aligned}$$


CHECK The units of the answer (%) are correct. The magnitude is reasonable because (1) it is between 0 and 100% and (2) chlorine is the heaviest atom in the molecule and there are four of them.

FOR PRACTICE 4.11

Acetic acid ($\text{C}_2\text{H}_4\text{O}_2$) is the active ingredient in vinegar. Calculate the mass percent composition of oxygen in acetic acid.

FOR MORE PRACTICE 4.11

Calculate the mass percent composition of sodium in sodium oxide.

4.9
Cc

Conceptual
Connection

Chemical Formula and Mass Percent Composition

Without doing any calculations, list the elements in $\text{C}_6\text{H}_6\text{O}$ in order of decreasing mass percent composition.



Mass Percent Composition as a Conversion Factor

The mass percent composition of an element in a compound is a conversion factor between the mass of the element and the mass of the compound. For example, we saw that the mass percent composition of Cl in CCl_2F_2 is 58.64%. Since percent means *per hundred*, there are 58.64 grams Cl *per hundred* grams CCl_2F_2 , which we express as the ratio:

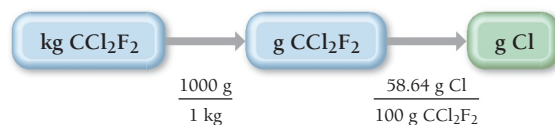
$$58.64 \text{ g Cl} : 100 \text{ g } \text{CCl}_2\text{F}_2$$

or, in fractional form:

$$\frac{58.64 \text{ g Cl}}{100 \text{ g } \text{CCl}_2\text{F}_2} \quad \text{or} \quad \frac{100 \text{ g } \text{CCl}_2\text{F}_2}{58.64 \text{ g Cl}}$$

These ratios function as conversion factors between grams of Cl and grams of CCl_2F_2 . For example, to calculate the mass of Cl in 1.00 kg CCl_2F_2 , we use the following conceptual plan:

Conceptual Plan



Notice that the mass percent composition acts as a conversion factor between grams of the compound and grams of the constituent element. To calculate grams Cl, we follow the conceptual plan.

Solution

$$1.00 \text{ kg } \text{CCl}_2\text{F}_2 \times \frac{1000 \text{ g}}{1 \text{ kg}} \times \frac{58.64 \text{ g Cl}}{100 \text{ g } \text{CCl}_2\text{F}_2} = 5.86 \times 10^2 \text{ g Cl}$$

EXAMPLE 4.12

Using Mass Percent Composition as a Conversion Factor

The U.S. Food and Drug Administration (FDA) recommends that a person consume less than 2.4 g of sodium per day. What mass of sodium chloride (in grams) can you consume and still be within the FDA guidelines? Sodium chloride is 39% sodium by mass.

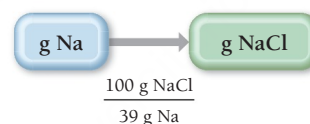
SORT You are given a mass of sodium and the mass percent of sodium in sodium chloride. You are asked to find the mass of NaCl that contains the given mass of sodium.

GIVEN: 2.4 g Na

FIND: g NaCl

STRATEGIZE Convert between mass of a constituent element and mass of a compound by using mass percent composition as a conversion factor.

CONCEPTUAL PLAN



RELATIONSHIPS USED

39 g Na: 100 g NaCl

SOLVE Follow the conceptual plan to solve the problem.

SOLUTION

$$2.4 \text{ g Na} \times \frac{100 \text{ g NaCl}}{39 \text{ g Na}} = 6.2 \text{ g NaCl}$$

You can consume 6.2 g NaCl and still be within the FDA guidelines.

CHECK The units of the answer are correct. The magnitude seems reasonable because it is larger than the given amount of sodium, as expected, because sodium is only one of the elements in NaCl.



◀ 12.5 packets of salt contain 6.2 g of NaCl.

FOR PRACTICE 4.12

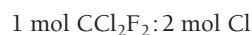
What mass (in grams) of iron(III) oxide contains 58.7 g of iron? Iron(III) oxide is 69.94% iron by mass.

FOR MORE PRACTICE 4.12

If someone consumes 22 g of sodium chloride per day, what mass (in grams) of sodium does that person consume? Sodium chloride is 39% sodium by mass.

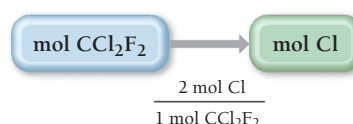
Conversion Factors from Chemical Formulas

Mass percent composition is one way to understand how much chlorine is in a particular chlorofluorocarbon or, more generally, how much of a constituent element is present in a given mass of any compound. However, we can also approach this type of problem in a different way. Chemical formulas contain within them inherent relationships between atoms (or moles of atoms) and molecules (or moles of molecules). For example, the formula for CCl_2F_2 tells us that 1 mol of CCl_2F_2 contains 2 mol of Cl atoms. We write the ratio as:



With ratios such as these—which come from the chemical formula—we can directly determine the amounts of the constituent elements present in a given amount of a compound without having to calculate mass percent composition. For example, we calculate the number of moles of Cl in 38.5 mol of CCl_2F_2 as follows:

Conceptual Plan

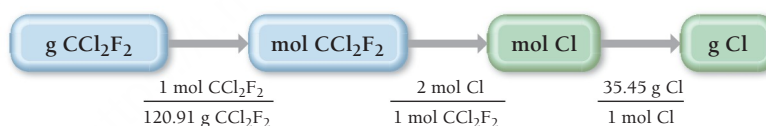


Solution

$$38.5 \text{ mol CCl}_2\text{F}_2 \times \frac{2 \text{ mol Cl}}{1 \text{ mol CCl}_2\text{F}_2} = 77.0 \text{ mol Cl}$$

As we have seen, however, we often want to know not the *amount in moles* of an element in a certain number of moles of compound, but the *mass in grams* (or other units) of a constituent element in a given *mass* of the compound. Suppose we want to know the mass (in grams) of Cl contained in 25.0 grams CCl_2F_2 . The relationship inherent in the chemical formula (2 mol Cl : 1 mol CCl_2F_2) applies to the amount in moles, not to mass. Therefore, we first convert the mass of CCl_2F_2 to moles CCl_2F_2 . Then we use the conversion factor from the chemical formula to convert to moles Cl. Finally, we use the molar mass of Cl to convert to grams Cl.

Conceptual Plan

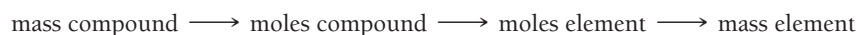


Solution

$$25.0 \text{ g CCl}_2\text{F}_2 \times \frac{1 \text{ mol CCl}_2\text{F}_2}{120.91 \text{ g CCl}_2\text{F}_2} \times \frac{2 \text{ mol Cl}}{1 \text{ mol CCl}_2\text{F}_2} \times \frac{35.45 \text{ g Cl}}{1 \text{ mol Cl}} = 14.7 \text{ g Cl}$$

Notice that we must convert from g CCl_2F_2 to mol CCl_2F_2 *before* we can use the chemical formula as a conversion factor. *Always remember that the chemical formula gives us a relationship between the amounts (in moles) of substances, not between the masses (in grams) of them.*

The general form for solving problems where we are asked to find the mass of an element present in a given mass of a compound is:



We use the atomic or molar mass to convert between mass and moles, and we use relationships inherent in the chemical to convert between moles and moles.

EXAMPLE 4.13**Chemical Formulas as Conversion Factors**Interactive
Worked Example
Video 4.13PEARSON
eText
2.0

Hydrogen may replace gasoline as a fuel in the future. Most major automobile companies are developing vehicles that run on hydrogen. These cars are environmentally friendly because their only emission is water vapor. One way to obtain hydrogen for fuel is to use an emission-free energy source such as wind power to form elemental hydrogen from water. What mass of hydrogen (in grams) is contained in 1.00 gallon of water? (The density of water is 1.00 g/mL.)

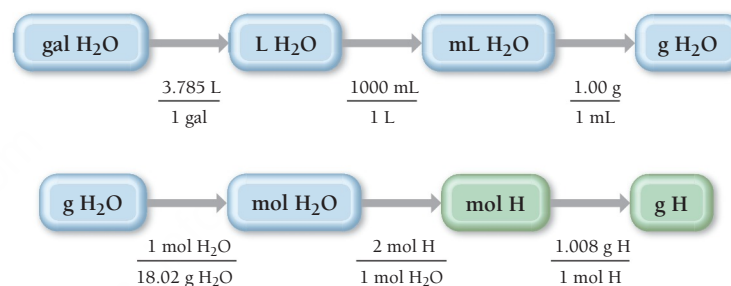
SORT You are given a volume of water and asked to find the mass of hydrogen it contains. You are also given the density of water.

STRATEGIZE The first part of the conceptual plan shows how to convert the units of volume from gallons to liters and then to milliliters. It also shows how you can then use the density to convert mL to g.

The second part of the conceptual plan is the basic sequence of
mass \longrightarrow moles \longrightarrow moles \longrightarrow mass.

Convert between moles and mass using the appropriate molar masses, and convert from mol H₂O to mol H using the conversion factor derived from the molecular formula.

GIVEN: 1.00 gal H₂O
 $d_{\text{H}_2\text{O}} = 1.00 \text{ g/mL}$
FIND: g H

CONCEPTUAL PLAN**RELATIONSHIPS USED**

$$3.785 \text{ L} = 1 \text{ gal}$$

$$1 \text{ mL} = 10^{-3} \text{ L}$$

$$1.00 \text{ g H}_2\text{O} = 1 \text{ mL H}_2\text{O} \text{ (density of H}_2\text{O)}$$

$$\text{molar mass H}_2\text{O} = 2(1.008) + 16.00 = 18.02 \text{ g/mol}$$

$$2 \text{ mol H} : 1 \text{ mol H}_2\text{O}$$

$$1.008 \text{ g H} = 1 \text{ mol H}$$

SOLVE Follow the conceptual plan to solve the problem.

SOLUTION

$$\begin{aligned}
 1.00 \text{ gal H}_2\text{O} &\times \frac{3.785 \text{ L}}{1 \text{ gal}} \times \frac{1 \text{ mL}}{10^{-3} \text{ L}} \times \frac{1.0 \text{ g}}{1 \text{ mL}} = 3.785 \times 10^3 \text{ g H}_2\text{O} \\
 3.785 \times 10^3 \text{ g H}_2\text{O} &\times \frac{1 \text{ mol H}_2\text{O}}{18.02 \text{ g H}_2\text{O}} \times \frac{2 \text{ mol H}}{1 \text{ mol H}_2\text{O}} \\
 &\quad \times \frac{1.008 \text{ g H}}{1 \text{ mol H}} = 4.23 \times 10^2 \text{ g H}
 \end{aligned}$$


CHECK The units of the answer (g H) are correct. Since a gal of water is about 3.8 L, its mass is about 3.8 kg. H is a light atom, so its mass should be significantly less than 3.8 kg, as it is in the answer.

FOR PRACTICE 4.13

Determine the mass of oxygen in a 7.2-g sample of Al₂(SO₄)₃.

FOR MORE PRACTICE 4.13

Butane (C₄H₁₀) is the liquid fuel in lighters. How many grams of carbon are present within a lighter containing 7.25 mL of butane? (The density of liquid butane is 0.601 g/mL.)



4.10

Cc

Conceptual
Connection

Chemical Formulas and Elemental Composition

Which ratio can be correctly derived from the molecular formula for water (H_2O)? Explain your answer.

- (a) 2 g H : 1 g H_2O
- (b) 2 mL H : 1 mL H_2O
- (c) 2 mol H : 1 mol H_2O

4.11 Determining a Chemical Formula from Experimental Data

In Section 4.10, we calculated mass percent composition from a chemical formula. Can we also do the reverse? Can we calculate a chemical formula from mass percent composition? This question is important because many laboratory analyses of compounds give the relative masses of each element present in the compound. For example, if we decompose water into hydrogen and oxygen in the laboratory, we can measure the masses of hydrogen and oxygen produced. Can we arrive at a chemical formula from this kind of data? The answer is a qualified yes. We can determine a chemical formula, but it is an empirical formula (not a molecular formula). To get a molecular formula, we need additional information, such as the molar mass of the compound.

Suppose we decompose a sample of water in the laboratory and find that it produces 0.857 g of hydrogen and 6.86 g of oxygen. How do we determine an empirical formula from these data? We know that an empirical formula represents a ratio of atoms or a ratio of moles of atoms, *not a ratio of masses*. So the first thing we must do is convert our data from mass (in grams) to amount (in moles). How many moles of each element are present in the sample? To convert to moles, we divide each mass by the molar mass of that element.

$$\text{moles H} = 0.857 \text{ g H} \times \frac{1 \text{ mol H}}{1.01 \text{ g H}} = 0.849 \text{ mol H}$$

$$\text{moles O} = 6.86 \text{ g O} \times \frac{1 \text{ mol O}}{16.00 \text{ g O}} = 0.429 \text{ mol O}$$

From these data, we know there are 0.849 mol H for every 0.429 mol O. We can now write a pseudo-formula for water.



To get the smallest whole-number subscripts in our formula, we divide all the subscripts by the smallest one, in this case 0.429.

$$\text{H}_{\frac{0.849}{0.429}}\text{O}_{\frac{0.429}{0.429}} = \text{H}_{1.98}\text{O} = \text{H}_2\text{O}$$

Our empirical formula for water, which also happens to be the molecular formula, is H_2O . You can use the procedure in Examples 4.14 and 4.15 to obtain the empirical formula of any compound from experimental data giving the relative masses of the constituent elements. The left column outlines the procedure, and the center and right columns contain two examples of how to apply the procedure.

PROCEDURE FOR
Obtaining an Empirical
Formula from
Experimental Data

1. Write down (or calculate) as *given* the masses of each element present in a sample of the compound. If you are given mass percent composition, assume a 100-g sample and calculate the masses of each element from the given percentages.
2. Convert each of the masses from Step 1 to moles by using the appropriate molar mass for each element as a conversion factor.
3. Write down a pseudoformula for the compound using the number of moles of each element (from Step 2) as subscripts.
4. Divide all the subscripts in the formula by the smallest subscript.
5. If the subscripts are not whole numbers, multiply all the subscripts by a small whole number (see table) to determine whole-number subscripts.
- | Fractional Subscript | Multiply by This |
|----------------------|------------------|
| 0.20 | 5 |
| 0.25 | 4 |
| 0.33 | 3 |
| 0.40 | 5 |
| 0.50 | 2 |
| 0.66 | 3 |
| 0.75 | 4 |
| 0.80 | 5 |

EXAMPLE 4.14
Obtaining an Empirical Formula
from Experimental Data

A compound containing nitrogen and oxygen is decomposed in the laboratory and produces 24.5 g nitrogen and 70.0 g oxygen. Find the empirical formula of the compound.

GIVEN: 24.5 g N, 70.0 g O
FIND: empirical formula

$$24.5 \text{ g N} \times \frac{1 \text{ mol N}}{14.01 \text{ g N}} = 1.75 \text{ mol N}$$
$$70.0 \text{ g O} \times \frac{1 \text{ mol O}}{16.00 \text{ g O}} = 4.38 \text{ mol O}$$

$$\text{N}_{1.75}\text{O}_{4.38}$$

$$\text{N}_{\frac{1.75}{1.75}}\text{O}_{\frac{4.38}{1.75}} \longrightarrow \text{N}_1\text{O}_{2.5}$$

$$\text{N}_1\text{O}_{2.5} \times 2 \longrightarrow \text{N}_2\text{O}_5$$

The correct empirical formula is N_2O_5 .

FOR PRACTICE 4.14
A sample of a compound is decomposed in the laboratory and produces 165 g carbon, 27.8 g hydrogen, and 220.2 g oxygen. Calculate the empirical formula of the compound.

EXAMPLE 4.15
Obtaining an Empirical Formula
from Experimental Data

A laboratory analysis of aspirin determined the following mass percent composition:

C 60.00%
H 4.48%
O 35.52%

Find the empirical formula of aspirin.

GIVEN: In a 100-g sample: 60.00 g C, 4.48 g H, 35.52 g O
FIND: empirical formula

$$60.00 \text{ g C} \times \frac{1 \text{ mol C}}{12.01 \text{ g C}} = 4.996 \text{ mol C}$$
$$4.48 \text{ g H} \times \frac{1 \text{ mol H}}{1.008 \text{ g H}} = 4.44 \text{ mol H}$$
$$35.52 \text{ g O} \times \frac{1 \text{ mol O}}{16.00 \text{ g O}} = 2.220 \text{ mol O}$$

$$\text{C}_{4.996}\text{H}_{4.44}\text{O}_{2.220}$$

$$\text{C}_{\frac{4.996}{2.220}}\text{H}_{\frac{4.44}{2.220}}\text{O}_{\frac{2.220}{2.220}} \longrightarrow \text{C}_{2.25}\text{H}_2\text{O}_1$$

$$\text{C}_{2.25}\text{H}_2\text{O}_1 \times 4 \longrightarrow \text{C}_9\text{H}_8\text{O}_4$$

The correct empirical formula is $\text{C}_9\text{H}_8\text{O}_4$.

FOR PRACTICE 4.15
Ibuprofen has the following mass percent composition:
C 75.69%, H 8.80%, O 15.51%.
What is the empirical formula of ibuprofen?

Calculating Molecular Formulas for Compounds

We can determine the molecular formula of a compound from the empirical formula if we also know the molar mass of the compound. Recall from Section 4.3 that the molecular formula is always a whole-number multiple of the empirical formula.

molecular formula = empirical formula $\times n$, where $n = 1, 2, 3, \dots$

Suppose we want to find the molecular formula for fructose (a sugar found in fruit) from its empirical formula, CH_2O , and its molar mass, 180.2 g/mol. We know that the molecular formula is a whole-number multiple of CH_2O .

molecular formula = $(\text{CH}_2\text{O}) \times n$
= $\text{C}_n\text{H}_{2n}\text{O}_n$

We also know that the molar mass is a whole-number multiple of the **empirical formula molar mass**, the sum of the masses of all the atoms in the empirical formula.

molar mass = empirical formula molar mass $\times n$

For a particular compound, the value of n in both cases is the same. Therefore, we can find n by calculating the ratio of the molar mass to the empirical formula molar mass.

$$n = \frac{\text{molar mass}}{\text{empirical formula molar mass}}$$

For fructose, the empirical formula molar mass is:
empirical formula molar mass

= 12.01 g/mol + 2(1.01 g/mol) + 16.00 g/mol = 30.03 g/mol

Therefore, n is:

$$n = \frac{180.2 \text{ g/mol}}{30.03 \text{ g/mol}} = 6$$

We can then use this value of n to find the molecular formula.

molecular formula = $(\text{CH}_2\text{O}) \times 6 = \text{C}_6\text{H}_{12}\text{O}_6$

EXAMPLE 4.16

Calculating a Molecular Formula from an Empirical Formula and Molar Mass

Butanedione—a main component responsible for the smell and taste of butter and cheese—contains the elements carbon, hydrogen, and oxygen. The empirical formula of butanedione is $\text{C}_2\text{H}_3\text{O}$, and its molar mass is 86.09 g/mol. Find its molecular formula.

SORT You are given the empirical formula and molar mass of butanedione and asked to find the molecular formula.

GIVEN: empirical formula = $\text{C}_2\text{H}_3\text{O}$
molar mass = 86.09 g/mol
FIND: molecular formula

STRATEGIZE A molecular formula is always a whole-number multiple of the empirical formula. Divide the molar mass by the empirical formula mass to determine the whole number.

molecular formula = empirical formula $\times n$
$$n = \frac{\text{molar mass}}{\text{empirical formula molar mass}}$$

SOLVE Calculate the empirical formula mass.
Divide the molar mass by the empirical formula mass to find n . Multiply the empirical formula by n to obtain the molecular formula.

empirical formula molar mass
= 2(12.01 g/mol) + 3(1.008 g/mol) + 16.00 g/mol = 43.04 g/mol
$$n = \frac{\text{molar mass}}{\text{empirical formula mass}} = \frac{86.09 \text{ g/mol}}{43.04 \text{ g/mol}} = 2$$

molecular formula = $\text{C}_2\text{H}_3\text{O} \times 2 = \text{C}_4\text{H}_6\text{O}_2$

CHECK Check the answer by calculating the molar mass of the formula as follows:

$$4(12.01 \text{ g/mol}) + 6(1.008 \text{ g/mol}) + 2(16.00 \text{ g/mol}) = 86.09 \text{ g/mol}$$

The calculated molar mass is in agreement with the given molar mass.

FOR PRACTICE 4.16

A compound has the empirical formula CH and a molar mass of 78.11 g/mol. What is its molecular formula?

FOR MORE PRACTICE 4.16

A compound with the percent composition shown here has a molar mass of 60.10 g/mol. Determine its molecular formula.

C, 39.97%

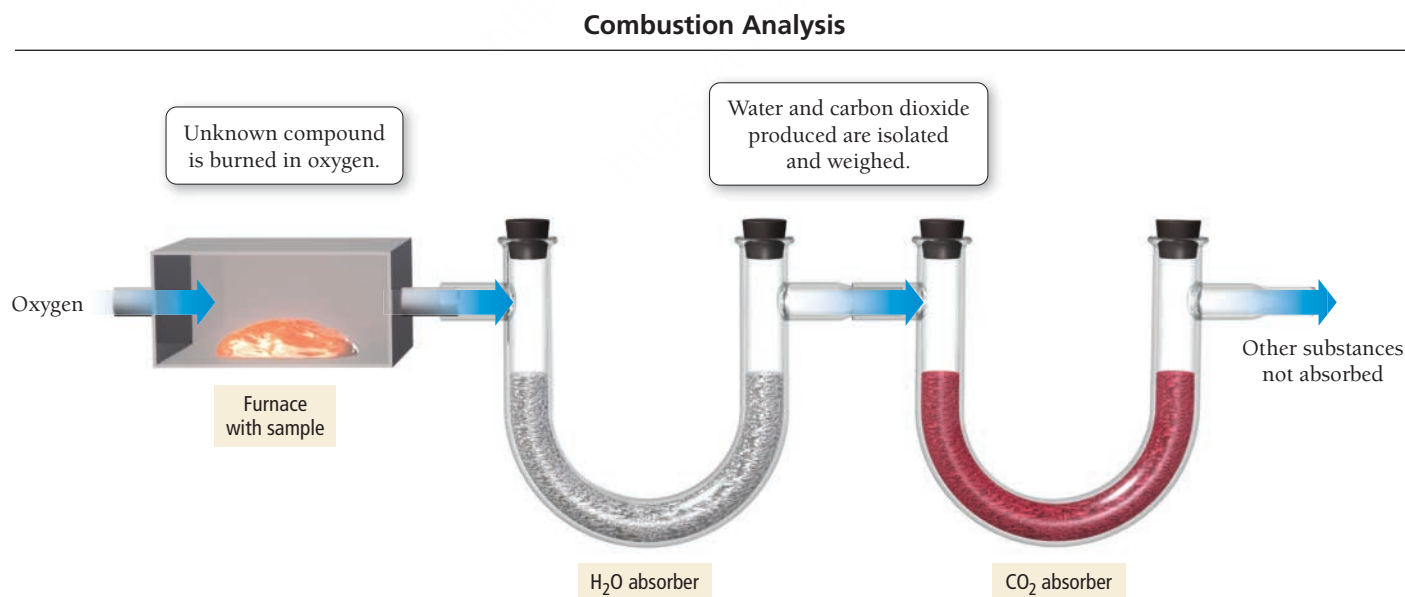
H, 13.41%

N, 46.62%

Combustion Analysis

In the previous section, we discussed how to determine the empirical formula of a compound from the relative masses of its constituent elements. Another common (and related) way to obtain empirical formulas for unknown compounds, especially those containing carbon and hydrogen, is **combustion analysis**. In combustion analysis, the unknown compound undergoes combustion (or burning) in the presence of pure oxygen, as shown in **Figure 4.11** ▼. When the sample is burned, all of the carbon in the sample is converted to CO_2 , and all of the hydrogen is converted to H_2O . The CO_2 and H_2O are then weighed. With these masses, we can use the numerical relationships between moles inherent in the formulas for CO_2 and H_2O (1 mol CO_2 : 1 mol C and 1 mol H_2O : 2 mol H) to determine the amounts of C and H in the original sample. We can determine the amounts of any other elemental constituents, such as O, Cl, or N, by subtracting the original mass of the sample from the sum of the masses of C and H. Examples 4.17 and 4.18 demonstrate how to perform these calculations for a sample containing only C and H and for a sample containing C, H, and O.

Combustion is a type of *chemical reaction*. We discuss chemical reactions and their representation in Chapter 7.



▲ FIGURE 4.11 Combustion Analysis Apparatus The sample to be analyzed is placed in a furnace and burned in oxygen. The water and carbon dioxide produced are absorbed into separate containers and weighed.

Interactive Worked
Example Video 4.18



EXAMPLE 4.17

EXAMPLE 4.18

PROCEDURE FOR Obtaining an Empirical Formula from Combustion Analysis	Obtaining an Empirical Formula from Combustion Analysis	Obtaining an Empirical Formula from Combustion Analysis
	Upon combustion, a compound containing only carbon and hydrogen produces 1.83 g CO ₂ and 0.901 g H ₂ O. Determine the empirical formula of the compound.	Upon combustion, a 0.8233-g sample of a compound containing only carbon, hydrogen, and oxygen produces 2.445 g CO ₂ and 0.6003 g H ₂ O. Determine the empirical formula of the compound.
1. Write down as given the masses of each combustion product and the mass of the sample (if given).	GIVEN: 1.83 g CO ₂ , 0.901 g H ₂ O FIND: empirical formula	GIVEN: 0.8233-g sample, 2.445 g CO ₂ , 0.6003 g H ₂ O FIND: empirical formula
2. Convert the masses of CO ₂ and H ₂ O from Step 1 to moles by using the appropriate molar mass for each compound as a conversion factor.	$1.83 \text{ g CO}_2 \times \frac{1 \text{ mol CO}_2}{44.01 \text{ g CO}_2} = 0.0416 \text{ mol CO}_2$ $0.901 \text{ g H}_2\text{O} \times \frac{1 \text{ mol H}_2\text{O}}{18.02 \text{ g H}_2\text{O}} = 0.0500 \text{ mol H}_2\text{O}$	$2.445 \text{ g CO}_2 \times \frac{1 \text{ mol CO}_2}{44.01 \text{ g CO}_2} = 0.05556 \text{ mol CO}_2$ $0.6003 \text{ g H}_2\text{O} \times \frac{1 \text{ mol H}_2\text{O}}{18.02 \text{ g H}_2\text{O}} = 0.03331 \text{ mol H}_2\text{O}$
3. Convert the moles of CO ₂ and moles of H ₂ O from Step 2 to moles of C and moles of H using the conversion factors inherent in the chemical formulas of CO ₂ and H ₂ O.	$0.0416 \text{ mol CO}_2 \times \frac{1 \text{ mol C}}{1 \text{ mol CO}_2} = 0.0416 \text{ mol C}$ $0.0500 \text{ mol H}_2\text{O} \times \frac{2 \text{ mol H}}{1 \text{ mol H}_2\text{O}} = 0.100 \text{ mol H}$	$0.05556 \text{ mol CO}_2 \times \frac{1 \text{ mol C}}{1 \text{ mol CO}_2} = 0.05556 \text{ mol C}$ $0.03331 \text{ mol H}_2\text{O} \times \frac{2 \text{ mol H}}{1 \text{ mol H}_2\text{O}} = 0.06662 \text{ mol H}$
4. If the compound contains an element other than C and H, find the mass of the other element by subtracting the sum of the masses of C and H (obtained in Step 3) from the mass of the sample. Finally, convert the mass of the other element to moles.	The sample contains no elements other than C and H, so proceed to next step.	$\text{mass C} = 0.05556 \text{ mol C} \times \frac{12.01 \text{ g C}}{1 \text{ mol C}} = 0.6673 \text{ g C}$ $\text{mass H} = 0.06662 \text{ mol H} \times \frac{1.008 \text{ g H}}{1 \text{ mol H}} = 0.06715 \text{ g H}$ $\text{mass O} = 0.8233 \text{ g} - (0.6673 \text{ g} + 0.06715 \text{ g}) = 0.0889 \text{ g}$ $\text{mol O} = 0.0889 \text{ g O} \times \frac{1 \text{ mol O}}{16.00 \text{ g O}} = 0.00556 \text{ mol O}$
5. Write down a pseudoformula for the compound using the number of moles of each element (from Steps 3 and 4) as subscripts.	C _{0.0416} H _{0.100}	C _{0.05556} H _{0.06662} O _{0.00556}
6. Divide all the subscripts in the formula by the smallest subscript. (Round all subscripts that are within 0.1 of a whole number.)	$\text{C}_{\frac{0.0416}{0.0416}}\text{H}_{\frac{0.100}{0.0416}} \longrightarrow \text{C}_1\text{H}_{2.4}$	$\text{C}_{\frac{0.05556}{0.00556}}\text{H}_{\frac{0.06662}{0.00556}}\text{O}_{\frac{0.00556}{0.00556}} \longrightarrow \text{C}_{10}\text{H}_{12}\text{O}_1$

7. If the subscripts are not whole numbers, multiply all the subscripts by a small whole number to determine whole-number subscripts.	$C_1H_{2.4} \times 5 \longrightarrow C_5H_{12}$ The correct empirical formula is C_5H_{12} .	The subscripts are whole numbers; no additional multiplication is needed. The correct empirical formula is $C_{10}H_{12}O$.
	FOR PRACTICE 4.17 Upon combustion, a compound containing only carbon and hydrogen produces 1.60 g CO_2 and 0.819 g H_2O . Find the empirical formula of the compound.	FOR PRACTICE 4.18 Upon combustion, a 0.8009-g sample of a compound containing only carbon, hydrogen, and oxygen produces 1.6004 g CO_2 and 0.6551 g H_2O . Find the empirical formula of the compound.

4.12 Organic Compounds

In this chapter, we have examined chemical compounds. Early chemists divided compounds into two types: organic and inorganic. On the one hand, they designated organic compounds as those that originate from living things. Sugar—from sugarcane or the sugar beet—is a common example of an organic compound. Inorganic compounds, on the other hand, originate from the Earth. Salt—mined from the ground or from the ocean—is a common example of an inorganic compound.

Eighteenth-century chemists could synthesize inorganic compounds in the laboratory but not organic compounds, so a clear difference existed between the two different types of compounds. Today, chemists can synthesize both organic and inorganic compounds, and even though organic chemistry is a subfield of chemistry, the differences between organic and inorganic compounds are now viewed as primarily organizational (not fundamental).

Organic compounds are common in everyday substances. Many smells—such as those in perfumes, spices, and foods—come from organic compounds. When we sprinkle cinnamon onto our French toast, some cinnamaldehyde—an organic compound present in cinnamon—evaporates into the air and we experience the unique smell of cinnamon. Organic compounds are the major components of living organisms. They are also the main components of most of our fuels, such as gasoline, oil, and natural gas, and they are the active ingredients in most pharmaceuticals, such as aspirin and ibuprofen.

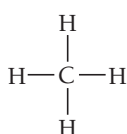
Organic compounds are composed of carbon and hydrogen and a few other elements, including nitrogen, oxygen, and sulfur. The key element in organic chemistry, however, is carbon. In its compounds, carbon always forms four bonds. The simplest organic compound is methane or CH_4 .



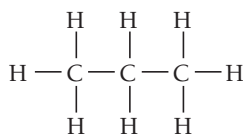
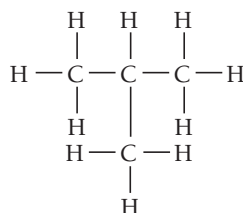
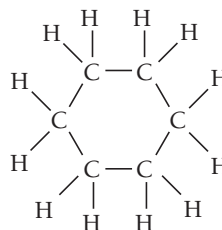
▲ The organic compound cinnamaldehyde is largely responsible for the taste and smell of cinnamon.

Structural formula

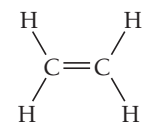
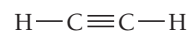
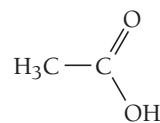
Space-filling model

Methane, CH_4

The chemistry of carbon is unique and complex because carbon frequently bonds to itself to form chain, branched, and ring structures such as the ones shown here:

Propane (C_3H_8)Isobutane (C_4H_{10})Cyclohexane (C_6H_{12})

Carbon can also form double bonds and triple bonds with itself and with other elements:

Ethene (C_2H_4)Ethyne (C_2H_2)Acetic acid (CH_3COOH)

This versatility allows carbon to serve as the backbone of millions of different chemical compounds, which is why a general survey of organic chemistry is a year-long course. For now, all you need to know is that the simplest organic compounds are **hydrocarbons**, and they are composed of carbon and hydrogen. Hydrocarbons compose common fuels such as oil, gasoline, liquid petroleum gas, and natural gas. Table 4.5 lists some common hydrocarbons. You will recognize some of these compounds from your daily life. We often use organic compounds in examples throughout this book.

TABLE 4.5 Common Hydrocarbons

Name	Molecular Formula	Structural Formula	Space-filling Model	Common Uses
Methane	CH_4	$\begin{array}{c} \text{H} \\ \\ \text{H}-\text{C}-\text{H} \\ \\ \text{H} \end{array}$		Primary component of natural gas
Propane	C_3H_8	$\begin{array}{c} \text{H} & \text{H} & \text{H} \\ & & \\ \text{H}-\text{C} & -\text{C} & -\text{C}-\text{H} \\ & & \\ \text{H} & \text{H} & \text{H} \end{array}$		LP gas for grills and outdoor stoves
<i>n</i> -Butane*	C_4H_{10}	$\begin{array}{c} \text{H} & \text{H} & \text{H} & \text{H} \\ & & & \\ \text{H}-\text{C} & -\text{C} & -\text{C} & -\text{C}-\text{H} \\ & & & \\ \text{H} & \text{H} & \text{H} & \text{H} \end{array}$		Common fuel for lighters
<i>n</i> -Pentane*	C_5H_{12}	$\begin{array}{c} \text{H} & \text{H} & \text{H} & \text{H} & \text{H} \\ & & & & \\ \text{H}-\text{C} & -\text{C} & -\text{C} & -\text{C} & -\text{C}-\text{H} \\ & & & & \\ \text{H} & \text{H} & \text{H} & \text{H} & \text{H} \end{array}$		Component of gasoline
Ethene	C_2H_4	$\begin{array}{c} \text{H} & & \text{H} \\ & \backslash & / \\ & \text{C} = \text{C} \\ & / & \backslash \\ \text{H} & & \text{H} \end{array}$		Ripening agent in fruit
Ethyne	C_2H_2	$\text{H}-\text{C}\equiv\text{C}-\text{H}$		Fuel for welding torches

*The “*n*” in the names of these hydrocarbons stands for “normal,” which means straight chain.

SELF-ASSESSMENT



QUIZ

- What is the empirical formula of the compound with the molecular formula $C_{10}H_8$?
a) C_5H_3 b) C_2H_4 c) C_5H_4 d) CH
- Which substance is an ionic compound?
a) SrI_2 b) N_2O_4 c) He d) CCl_4
- What is the correct formula for the compound that forms between calcium and sulfur?
a) CaS b) Ca_2S c) CaS_2 d) CaS_3
- Name the compound SrI_2 .
a) strontium iodide b) strontium diiodide
c) strontium(II) iodide d) strontium(II) diiodide
- What is the formula for manganese(IV) oxide?
a) Mn_4O b) MnO_4 c) Mn_2O d) MnO_2
- Name the compound $Pb(C_2H_3O_2)_2$.
a) lead(II) carbonate b) lead(II) acetate
c) lead bicarbonate d) lead diacetate
- Name the compound P_2I_4 .
a) phosphorus iodide b) phosphorus diiodide
c) phosphorus(II) iodide d) diphosphorus tetraiodide
- What is the correct Lewis symbol for S?
a) $:S:$ b) $:\ddot{S}:$ c) $:\ddot{S}:$ d) $:S$
- How many CH_2Cl_2 molecules are there in 25.0 g of CH_2Cl_2 ?
a) 0.294 molecules b) 1.77×10^{23} molecules
c) 1.28×10^{27} molecules d) 1.51×10^{25} molecules
- List the elements in the compound CF_2Cl_2 in order of decreasing mass percent composition.
a) $C > F > Cl$ b) $F > Cl > C$
c) $Cl > C > F$ d) $Cl > F > C$
- Determine the mass of potassium in 35.5 g of KBr.
a) 17.4 g b) 0.298 g c) 11.7 g d) 32.9 g
- A compound is 52.14% C, 13.13% H, and 34.73% O by mass. What is the empirical formula of the compound?
a) $C_2H_8O_3$ b) C_2H_6O c) C_4HO_3 d) C_3HO_6
- A compound has the empirical formula CH_2O and a formula mass of 120.10 amu. What is the molecular formula of the compound?
a) CH_2O b) $C_2H_4O_2$
c) $C_3H_6O_3$ d) $C_4H_8O_4$
- Combustion of 30.42 g of a compound containing only carbon, hydrogen, and oxygen produces 35.21 g CO_2 and 14.42 g H_2O . What is the empirical formula of the compound?
a) $C_4H_8O_6$ b) $C_2H_4O_3$
c) $C_2H_2O_3$ d) C_6HO_{12}

Answers: 1. c; 2. a; 3. a; 4. a; 5. d; 6. b; 7. d; 8. b; 9. b; 10. d; 11. c; 12. b; 13. d; 14. b

CHAPTER SUMMARY

4

MasteringChemistry™ provides end-of-chapter exercises, feedback-enriched tutorial problems, animations, and interactive activities to encourage problem solving practice and deeper understanding of key concepts and topics.

REVIEW

KEY LEARNING OUTCOMES

CHAPTER OBJECTIVES	ASSESSMENT
Write Molecular and Empirical Formulas (4.3)	• Example 4.1 For Practice 4.1 Exercises 31–36
Use Lewis Symbols to Predict the Chemical Formula of an Ionic Compound (4.5)	• Example 4.2 For Practice 4.2 Exercises 43, 44
Write Formulas for Ionic Compounds (4.6)	• Examples 4.3, 4.4 For Practice 4.3, 4.4 Exercises 47–50
Name Ionic Compounds (4.6)	• Examples 4.5, 4.6 For Practice 4.5, 4.6 For More Practice 4.5, 4.6 Exercises 51–54
Name Ionic Compounds Containing Polyatomic Ions (4.6)	• Example 4.7 For Practice 4.7 For More Practice 4.7 Exercises 55, 56
Name Molecular Compounds (4.8)	• Example 4.8 For Practice 4.8 For More Practice 4.8 Exercises 63–66

Calculate Formula Mass (4.9)	• Example 4.9 For Practice 4.9 Exercises 71, 72
Use Formula Mass to Count Molecules by Weighing (4.9)	• Example 4.10 For Practice 4.10 For More Practice 4.10 Exercises 77–80
Calculate Mass Percent Composition (4.10)	• Example 4.11 For Practice 4.11 For More Practice 4.11 Exercises 83–86
Use Mass Percent Composition as a Conversion Factor (4.10)	• Example 4.12 For Practice 4.12 For More Practice 4.12 Exercises 87–90
Use Chemical Formulas as Conversion Factors (4.10)	• Example 4.13 For Practice 4.13 For More Practice 4.13 Exercises 93–96
Obtain an Empirical Formula from Experimental Data (4.11)	• Examples 4.14, 4.15 For Practice 4.14, 4.15 Exercises 97–104
Calculate a Molecular Formula from an Empirical Formula and Molar Mass (4.11)	• Example 4.16 For Practice 4.16 For More Practice 4.16 Exercises 105, 106
Determine an Empirical Formula from Combustion Analysis (4.11)	• Examples 4.17, 4.18 For Practice 4.17, 4.18 Exercises 107–110

KEY TERMS

Section 4.2

chemical bond (p. 160)
 ionic bond (p. 161)
 ionic compound (p. 162)
 covalent bond (p. 162)
 molecular compound (p. 162)

Section 4.3

chemical formula (p. 162)
 empirical formula (p. 162)
 molecular formula (p. 162)
 structural formula (p. 162)
 ball-and-stick molecular model (p. 164)
 space-filling molecular model (p. 164)

Section 4.4

Lewis model (p. 164)
 Lewis electron-dot structure (Lewis structure) (p. 164)
 Lewis symbol (p. 165)
 octet (p. 166)
 duet (p. 166)
 octet rule (p. 166)

Section 4.5

formula unit (p. 166)
 lattice energy (p. 168)

Section 4.6

common name (p. 170)
 systematic name (p. 170)

binary compound (p. 171)
 polyatomic ion (p. 173)
 oxyanion (p. 174)
 hydrate (p. 174)

Section 4.7

bonding pair (p. 175)
 lone pair (nonbonding electrons) (p. 175)
 double bond (p. 176)
 triple bond (p. 176)

Section 4.9

formula mass (p. 179)

Section 4.10

mass percent composition (mass percent) (p. 181)

Section 4.11

empirical formula molar mass (p. 188)
 combustion analysis (p. 189)

Section 4.12

organic compound (p. 191)
 hydrocarbon (p. 192)

KEY CONCEPTS

Types of Chemical Bonds (4.2)

- Chemical bonds, the forces that hold atoms together in compounds, arise from the interactions between nuclei and electrons in atoms.
- In an ionic bond, one or more electrons are *transferred* from one atom to another, forming a cation (positively charged) and an anion (negatively charged). The two ions are drawn together by the attraction between the opposite charges.
- In a covalent bond, one or more electrons are *shared* between two atoms. The atoms are held together by the attraction between their nuclei and the shared electrons.

Representing Molecules and Compounds (4.3)

- A compound is represented with a chemical formula, which indicates the elements present and the number of atoms of each.

- An empirical formula gives only the *relative* number of atoms, while a molecular formula gives the *actual* number of atoms present in the molecule.
- Structural formulas show how the atoms are bonded together, while molecular models portray the geometry of the molecule.

The Lewis Model (4.4)

- In the Lewis model, chemical bonds form when atoms transfer (ionic bonding) or share (covalent bonding) valence electrons to attain noble gas electron configurations.
- The Lewis model represents valence electrons as dots surrounding the symbol for an element. When two or more elements bond together, the dots are transferred or shared so that every atom gets eight dots, an octet (or two dots, a duet, in the case of hydrogen).

Ionic Bonding (4.5)

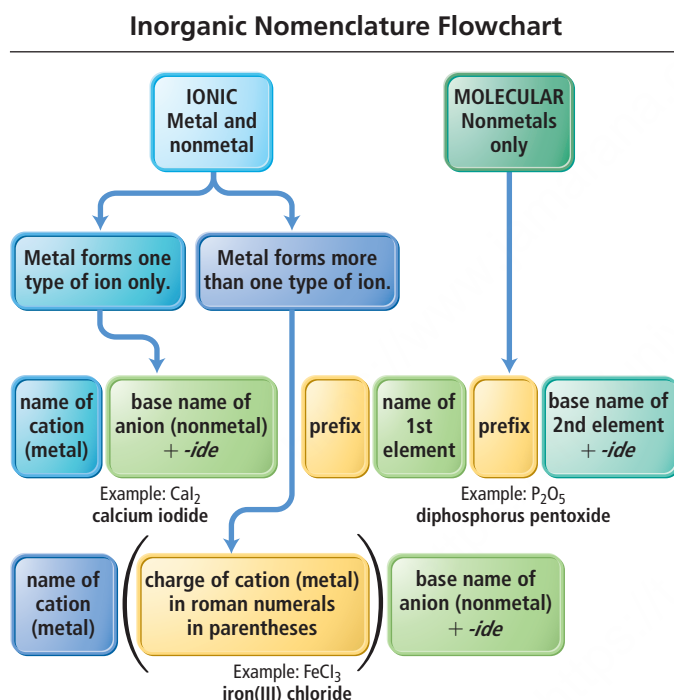
- In an ionic Lewis structure involving main-group metals, the metal transfers its valence electrons (dots) to the nonmetal.
- The formation of most ionic compounds is exothermic because of lattice energy, which is the energy released when metal cations and nonmetal anions coalesce to form a solid.

Covalent Bonding (4.7)

- In a covalent Lewis structure, neighboring atoms share valence electrons to attain octets (or duets).
- A single shared electron pair constitutes a single bond, while two or three shared pairs constitute double or triple bonds, respectively.

Naming Inorganic Ionic and Molecular Compounds (4.6, 4.8)

- A flowchart for naming simple inorganic compounds follows.

**Formula Mass and Mole Concept for Compounds (4.9)**

- The formula mass of a compound is the sum of the atomic masses of all the atoms in the chemical formula. Like the atomic masses of elements, the formula mass characterizes the average mass of a molecule (or a formula unit).
- The mass of one mole of a compound is its molar mass and equals its formula mass (in grams).

Chemical Composition (4.10, 4.11)

- The mass percent composition of a compound indicates each element's percentage of the total compound's mass. We can determine the mass percent composition from the compound's chemical formula and the molar masses of its elements.
- The chemical formula of a compound provides the relative number of atoms (or moles) of each element in a compound, and therefore we can use it to determine numerical relationships between moles of the compound and moles of its constituent elements.
- If we know the mass percent composition and molar mass of a compound, we can determine the compound's empirical and molecular formulas.

Organic Compounds (4.12)

- Organic compounds are composed of carbon, hydrogen, and a few other elements such as nitrogen, oxygen, and sulfur.
- The simplest organic compounds are hydrocarbons, compounds composed of only carbon and hydrogen.

KEY EQUATIONS AND RELATIONSHIPS**Formula Mass (4.9)**

$$\left(\frac{\# \text{ atoms of 1st element}}{\text{in chemical formula}} \times \frac{\text{atomic mass}}{\text{of 1st element}} \right) + \left(\frac{\# \text{ atoms of 2nd element}}{\text{in chemical formula}} \times \frac{\text{atomic mass}}{\text{of 2nd element}} \right) + \dots$$

Mass Percent Composition (4.10)

$$\text{mass \% of element X} = \frac{\text{mass of X in 1 mol compound}}{\text{mass of 1 mol compound}} \times 100\%$$

Empirical Formula Molar Mass (4.11)

$$\text{molecular formula} = n \times (\text{empirical formula})$$

$$n = \frac{\text{molar mass}}{\text{empirical formula molar mass}}$$

EXERCISES

REVIEW QUESTIONS


- How do the properties of compounds compare to the properties of the elements from which they are composed?
- What is a chemical bond? Why do chemical bonds form?
- Explain the difference between an ionic bond and a covalent bond.
- List and describe the different ways to represent compounds. Why are there so many?
- What is the difference between an empirical formula and a molecular formula?
- How do you determine how many dots to put around the Lewis symbol of an element?
- Describe the octet rule in the Lewis model.
- According to the Lewis model, what is a chemical bond?
- How can you use Lewis structures to determine the formula of ionic compounds? Give an example.
- What is lattice energy?
- Why is the formation of solid sodium chloride from solid sodium and gaseous chlorine exothermic, even though it takes more energy to form the Na^+ ion than the amount of energy released upon formation of Cl^- ?
- Explain how to write a formula for an ionic compound given the names of the metal and nonmetal (or polyatomic ion) in the compound.
- Explain how to name binary ionic compounds. How do you name an ionic compound if it contains a polyatomic ion?
- Why do the names of some ionic compounds include the charge of the metal ion while others do not?
- Within a covalent Lewis structure, what is the difference between lone pair and bonding pair electrons?
- In what ways are double and triple covalent bonds different from single covalent bonds?
- How does the Lewis model for covalent bonding account for why certain combinations of atoms are stable while others are not?
- How does the Lewis model for covalent bonding account for the relatively low melting and boiling points of molecular compounds (compared to ionic compounds)?
- Explain how to name molecular inorganic compounds.
- How many atoms are specified by each of these prefixes: mono, di, tri, tetra, penta, hexa?
- What is the formula mass for a compound? Why is it useful?
- Explain how the information in a chemical formula can be used to determine how much of a particular element is present in a given amount of a compound. Provide some examples of how this might be useful.
- What is mass percent composition? Why is it useful?
- Which kinds of conversion factors are inherent in chemical formulas? Provide an example.
- Which kind of chemical formula can be obtained from experimental data showing the relative masses of the elements in a compound?
- How can a molecular formula be obtained from an empirical formula? What additional information is required?
- What is combustion analysis? What is it used for?
- Which elements are normally present in organic compounds?

PROBLEMS BY TOPIC


Note: Answers to all odd-numbered Problems, numbered in blue, can be found in Appendix III. Exercises in the Problems by Topic section are paired, with each odd-numbered problem followed by a similar even-numbered problem. Exercises in the Cumulative Problems section are also paired but somewhat more loosely. Because of their nature, Challenge Problems and Conceptual Problems are unpaired.

Types of Compounds and Chemical Formulas

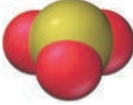
- Classify each compound as ionic or molecular.
 - CO_2
 - NiCl_2
 - NaI
 - PCl_3
- Classify each compound as ionic or molecular.
 - CF_2Cl_2
 - CCl_4
 - PtO_2
 - SO_3
- Determine the empirical formula for the compound represented by each molecular formula.
 - N_2O_4
 - C_5H_{12}
 - C_4H_{10}
- Determine the empirical formula for the compound represented by each molecular formula.
 - C_2H_4
 - $\text{C}_6\text{H}_{12}\text{O}_6$
 - NH_3
- Determine the number of each type of atom in each formula.
 - $\text{Mg}_3(\text{PO}_4)_2$
 - BaCl_2
 - $\text{Fe}(\text{NO}_2)_2$
 - $\text{Ca}(\text{OH})_2$
- Determine the number of each type of atom in each formula.
 - $\text{Ca}(\text{NO}_2)_2$
 - CuSO_4
 - $\text{Al}(\text{NO}_3)_3$
 - $\text{Mg}(\text{HCO}_3)_2$
- Write a chemical formula for each molecular model. (See Appendix II A for color codes.)




a.




b.




c.
- Write a chemical formula for each molecular model. (See Appendix II A for color codes.)



a.



b.



c.

Valence Electrons and Lewis Dot Structures

37. Write an electron configuration for N. Then write a Lewis symbol for N and show which electrons from the electron configuration are included in the Lewis symbol.
38. Write an electron configuration for Ne. Then write a Lewis symbol for Ne and show which electrons from the electron configuration are included in the Lewis symbol.
39. Write a Lewis symbol for each atom or ion.
 - a. Al
 - b. Na^+
 - c. Cl
 - d. Cl^-
40. Write a Lewis symbol for each atom or ion.
 - a. S^{2-}
 - b. Mg
 - c. Mg^{2+}
 - d. P

Ionic Bonding and Lattice Energy

41. Write the Lewis symbols that represent the ions in each ionic compound.
 - a. NaF
 - b. CaO
 - c. SrBr_2
 - d. K_2O
42. Write the Lewis symbols that represent the ions in each ionic compound.
 - a. SrO
 - b. Li_2S
 - c. CaI_2
 - d. RbF
43. Use Lewis symbols to determine the formula for the compound that forms between each pair of elements.
 - a. Sr and Se
 - b. Ba and Cl
 - c. Na and S
 - d. Al and O
44. Use Lewis symbols to determine the formula for the compound that forms between each pair of elements.
 - a. Ca and N
 - b. Mg and I
 - c. Ca and S
 - d. Cs and F
45. The lattice energy of CsF is -744 kJ/mol , whereas that of BaO is -3029 kJ/mol . Explain this large difference in lattice energy.
46. Rubidium iodide has a lattice energy of -617 kJ/mol , while potassium bromide has a lattice energy of -671 kJ/mol . Why is the lattice energy of potassium bromide more exothermic than the lattice energy of rubidium iodide?

Formulas and Names for Ionic Compounds

47. Write a formula for the ionic compound that forms between each pair of elements.
 - a. calcium and oxygen
 - b. zinc and sulfur
 - c. rubidium and bromine
 - d. aluminum and oxygen
48. Write a formula for the ionic compound that forms between each pair of elements.
 - a. silver and chlorine
 - b. sodium and sulfur
 - c. aluminum and sulfur
 - d. potassium and chlorine
49. Write a formula for the compound that forms between calcium and each polyatomic ion.
 - a. hydroxide
 - b. chromate
 - c. phosphate
 - d. cyanide

50. Write a formula for the compound that forms between potassium and each polyatomic ion.
 - a. carbonate
 - b. phosphate
 - c. hydrogen phosphate
 - d. acetate
51. Name each ionic compound.
 - a. Mg_3N_2
 - b. KF
 - c. Na_2O
 - d. Li_2S
 - e. CsF
 - f. KI
52. Name each ionic compound.
 - a. SnCl_4
 - b. PbI_2
 - c. Fe_2O_3
 - d. CuI_2
 - e. HgBr_2
 - f. CrCl_2
53. Name each ionic compound.
 - a. SnO
 - b. Cr_2S_3
 - c. RbI
 - d. BaBr_2
54. Name each ionic compound.
 - a. BaS
 - b. FeCl_3
 - c. PbI_4
 - d. SrBr_2
55. Name each ionic compound containing a polyatomic ion.
 - a. CuNO_2
 - b. $\text{Mg}(\text{C}_2\text{H}_3\text{O}_2)_2$
 - c. $\text{Ba}(\text{NO}_3)_2$
 - d. $\text{Pb}(\text{C}_2\text{H}_3\text{O}_2)_2$
56. Name each ionic compound containing a polyatomic ion.
 - a. $\text{Ba}(\text{OH})_2$
 - b. NH_4I
 - c. NaBrO_4
 - d. $\text{Fe}(\text{OH})_3$
57. Write the formula for each ionic compound.
 - a. sodium hydrogen sulfite
 - b. lithium permanganate
 - c. silver nitrate
 - d. potassium sulfate
 - e. rubidium hydrogen sulfate
 - f. potassium hydrogen carbonate
58. Write the formula for each ionic compound.
 - a. copper(II) chloride
 - b. copper(I) iodate
 - c. lead(II) chromate
 - d. calcium fluoride
 - e. potassium hydroxide
 - f. iron(II) phosphate
59. Write the name from the formula or the formula from the name for each hydrated ionic compound.
 - a. $\text{CoSO}_4 \cdot 7\text{H}_2\text{O}$
 - b. iridium(III) bromide tetrahydrate
 - c. $\text{Mg}(\text{BrO}_3)_2 \cdot 6\text{H}_2\text{O}$
 - d. potassium carbonate dihydrate
60. Write the name from the formula or the formula from the name for each hydrated ionic compound.
 - a. cobalt(II) phosphate octahydrate
 - b. $\text{BeCl}_2 \cdot 2\text{H}_2\text{O}$
 - c. chromium(III) phosphate trihydrate
 - d. $\text{LiNO}_2 \cdot \text{H}_2\text{O}$

Simple Lewis Structures, Formulas, and Names for Molecular Compounds

61. Use covalent Lewis structures to explain why each element (or family of elements) occurs as diatomic molecules.
 - a. hydrogen
 - b. the halogens
 - c. oxygen
 - d. nitrogen

62. Use covalent Lewis structures to explain why the compound that forms between nitrogen and hydrogen has the formula NH_3 . Show why NH_2 and NH_4 are not stable.
63. Name each molecular compound.
- CO
 - NI_3
 - SiCl_4
 - N_4Se_4
64. Name each molecular compound.
- SO_3
 - SO_2
 - BrF_5
 - NO
65. Write a formula for each molecular compound.
- phosphorus trichloride
 - chlorine monoxide
 - disulfur tetrafluoride
 - phosphorus pentafluoride
66. Write a formula for each molecular compound.
- boron tribromide
 - dichlorine monoxide
 - xenon tetrafluoride
 - carbon tetrabromide

Naming Compounds (When the Type Is Not Specified)

67. Name each compound. (Refer to the nomenclature flowchart found in the Key Concepts section of the Chapter in Review.)
- SrCl_2
 - SnO_2
 - P_2S_5
68. Name each compound. (Refer to the nomenclature flowchart found in the Key Concepts section of the Chapter in Review.)
- B_2Cl_2
 - BaCl_2
 - CrCl_3
69. Name each compound. (Refer to the nomenclature flowchart found in the Key Concepts section of the Chapter in Review.)
- KClO_3
 - I_2O_5
 - PbSO_4
70. Name each compound. (Refer to the nomenclature flowchart found in the Key Concepts section of the Chapter in Review.)
- XeO_3
 - KClO
 - CoSO_4

Formula Mass and the Mole Concept for Compounds

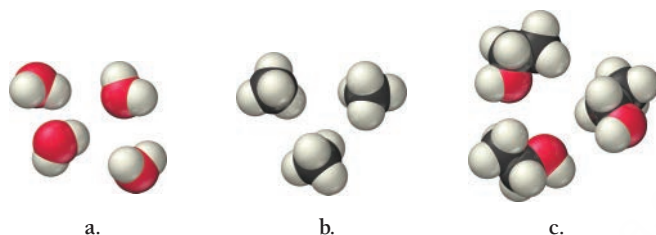
71. Calculate the formula mass for each compound.
- NO_2
 - C_4H_{10}
 - $\text{C}_6\text{H}_{12}\text{O}_6$
 - $\text{Cr}(\text{NO}_3)_3$
72. Calculate the formula mass for each compound.
- MgBr_2
 - HNO_2
 - CBr_4
 - $\text{Ca}(\text{NO}_3)_2$
73. Calculate the number of moles in each sample.
- 72.5 g CCl_4
 - 12.4 g $\text{C}_{12}\text{H}_{22}\text{O}_{11}$
 - 25.2 kg C_2H_2
 - 12.3 g of dinitrogen monoxide
74. Calculate the mass of each sample.
- 15.7 mol HNO_3
 - 1.04×10^{-3} mol H_2O_2
 - 72.1 mmol SO_2
 - 1.23 mol xenon difluoride
75. Determine the number of moles (of molecules or formula units) in each sample.
- 25.5 g NO_2
 - 1.25 kg CO_2
 - 38.2 g KNO_3
 - 155.2 kg Na_2SO_4

76. Determine the number of moles (of molecules or formula units) in each sample.
- 55.98 g CF_2Cl_2
 - 23.6 kg $\text{Fe}(\text{NO}_3)_2$
 - 0.1187 g C_8H_{18}
 - 195 kg CaO
77. How many molecules are in each sample?
- 6.5 g H_2O
 - 389 g CBr_4
 - 22.1 g O_2
 - 19.3 g C_8H_{10}
78. How many molecules (or formula units) are in each sample?
- 85.26 g CCl_4
 - 55.93 kg NaHCO_3
 - 119.78 g C_4H_{10}
 - 4.59×10^5 g Na_3PO_4
79. Calculate the mass (in g) of each sample.
- 5.94×10^{20} SO_3 molecules
 - 2.8×10^{22} H_2O molecules
 - 1 glucose molecule ($\text{C}_6\text{H}_{12}\text{O}_6$)
80. Calculate the mass (in g) of each sample.
- 4.5×10^{25} O_3 molecules
 - 9.85×10^{19} CCl_2F_2 molecules
 - 1 water molecule
81. A sugar crystal contains approximately 1.8×10^{17} sucrose ($\text{C}_{12}\text{H}_{22}\text{O}_{11}$) molecules. What is its mass in mg?
82. A salt crystal has a mass of 0.12 mg. How many NaCl formula units does it contain?

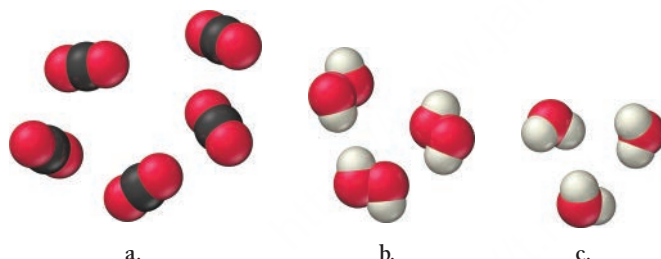
Composition of Compounds

83. Calculate the mass percent composition of carbon in each carbon-containing compound.
- CH_4
 - C_2H_6
 - C_2H_2
 - $\text{C}_2\text{H}_5\text{Cl}$
84. Calculate the mass percent composition of nitrogen in each nitrogen-containing compound.
- N_2O
 - NO
 - NO_2
 - HNO_3
85. Most fertilizers consist of nitrogen-containing compounds such as NH_3 , $\text{CO}(\text{NH}_2)_2$, NH_4NO_3 , and $(\text{NH}_4)_2\text{SO}_4$. Plants use the nitrogen content in these compounds for protein synthesis. Calculate the mass percent composition of nitrogen in each of the fertilizers named in this problem. Which fertilizer has the highest nitrogen content?
86. Iron in the earth is in the form of iron ore. Common ores include Fe_2O_3 (hematite), Fe_3O_4 (magnetite), and FeCO_3 (siderite). Calculate the mass percent composition of iron for each of these iron ores. Which ore has the highest iron content?
87. Copper(II) fluoride contains 37.42% F by mass. Calculate the mass of fluorine (in g) contained in 55.5 g of copper(II) fluoride.
88. Silver chloride, often used in silver plating, contains 75.27% Ag by mass. Calculate the mass of silver chloride required to plate 155 mg of pure silver.

89. The iodide ion is a dietary mineral essential to good nutrition. In countries where potassium iodide is added to salt, iodine deficiency (goiter) has been almost completely eliminated. The recommended daily allowance (RDA) for iodine is $150\ \mu\text{g/day}$. How much potassium iodide (76.45% I) must you consume to meet the RDA?
90. The American Dental Association recommends that an adult female should consume 3.0 mg of fluoride (F^-) per day to prevent tooth decay. If the fluoride is consumed in the form of sodium fluoride (45.24% F), what amount of sodium fluoride contains the recommended amount of fluoride?
91. Write a ratio showing the relationship between the molar amounts of each element for each compound.



92. Write a ratio showing the relationship between the molar amounts of each element for each compound.



93. Determine the number of moles of hydrogen atoms in each sample.
- 0.0885 mol C_4H_{10}
 - 1.3 mol CH_4
 - 2.4 mol C_6H_{12}
 - 1.87 mol C_8H_{18}
94. Determine the number of moles of oxygen atoms in each sample.
- 4.88 mol H_2O_2
 - 2.15 mol N_2O
 - 0.0237 mol H_2CO_3
 - 24.1 mol CO_2
95. Calculate mass (in grams) of sodium in 8.5 g of each sodium-containing food additive.
- NaCl (table salt)
 - Na_3PO_4 (sodium phosphate)
 - $\text{NaC}_7\text{H}_5\text{O}_2$ (sodium benzoate)
 - $\text{Na}_2\text{C}_6\text{H}_6\text{O}_7$ (sodium hydrogen citrate)
96. Calculate the mass (in kilograms) of chlorine in 25 kg of each chlorofluorocarbon (CFC).
- CF_2Cl_2
 - CFCl_3
 - $\text{C}_2\text{F}_3\text{Cl}_3$
 - CF_3Cl

Chemical Formulas from Experimental Data

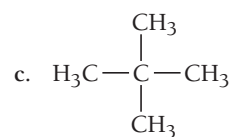
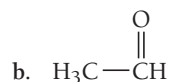
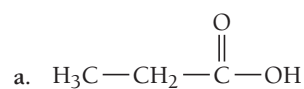
97. A chemist decomposes samples of several compounds; the masses of their constituent elements are shown. Calculate the empirical formula for each compound.
- 1.651 g Ag, 0.1224 g O
 - 0.672 g Co, 0.569 g As, 0.486 g O
 - 1.443 g Se, 5.841 g Br
98. A chemist decomposes samples of several compounds; the masses of their constituent elements are shown. Calculate the empirical formula for each compound.
- 1.245 g Ni, 5.381 g I
 - 2.677 g Ba, 3.115 g Br
 - 2.128 g Be, 7.557 g S, 15.107 g O
99. Calculate the empirical formula for each stimulant based on its elemental mass percent composition.
- nicotine (found in tobacco leaves): C 74.03%, H 8.70%, N 17.27%
 - caffeine (found in coffee beans): C 49.48%, H 5.19%, N 28.85%, O 16.48%
100. Calculate the empirical formula for each natural flavor based on its elemental mass percent composition.
- methyl butyrate (component of apple taste and smell): C 58.80%, H 9.87%, O 31.33%
 - vanillin (responsible for the taste and smell of vanilla): C 63.15%, H 5.30%, O 31.55%
101. The elemental mass percent composition of ibuprofen is 75.69% C, 8.80% H, and 15.51% O. Determine the empirical formula of ibuprofen.
102. The elemental mass percent composition of ascorbic acid (vitamin C) is 40.92% C, 4.58% H, and 54.50% O. Determine the empirical formula of ascorbic acid.
103. A 0.77-mg sample of nitrogen reacts with chlorine to form 6.61 mg of the chloride. Determine the empirical formula of nitrogen chloride.
104. A 45.2-mg sample of phosphorus reacts with selenium to form 131.6 mg of the selenide. Determine the empirical formula of phosphorus selenide.
105. The empirical formula and molar mass of several compounds are listed. Find the molecular formula of each compound.
- $\text{C}_6\text{H}_7\text{N}$, 186.24 g/mol
 - C_2HCl , 181.44 g/mol
 - $\text{C}_5\text{H}_{10}\text{NS}_2$, 296.54 g/mol
106. The molar mass and empirical formula of several compounds are listed. Find the molecular formula of each compound.
- C_4H_9 , 114.22 g/mol
 - CCl_4 , 284.77 g/mol
 - $\text{C}_3\text{H}_2\text{N}$, 312.29 g/mol
107. Combustion analysis of a hydrocarbon produced 33.01 g CO_2 and 13.51 g H_2O . Calculate the empirical formula of the hydrocarbon.
108. Combustion analysis of naphthalene, a hydrocarbon used in mothballs, produced 8.80 g CO_2 and 1.44 g H_2O . Calculate the empirical formula for naphthalene.
109. The foul odor of rancid butter is due largely to butyric acid, a compound containing carbon, hydrogen, and oxygen. Combustion analysis of a 4.30-g sample of butyric acid produces 8.59 g CO_2 and 3.52 g H_2O . Determine the empirical formula for butyric acid.

110. Tartaric acid is the white, powdery substance that coats tart candies such as Sour Patch Kids™. Combustion analysis of a 12.01-g sample of tartaric acid—which contains only carbon, hydrogen, and oxygen—produces 14.08 g CO₂ and 4.32 g H₂O. Determine the empirical formula for tartaric acid.

Organic Compounds

111. Classify each compound as organic or inorganic.
 a. CaCO₃ b. C₄H₈ c. C₄H₆O₆ d. LiF
112. Classify each compound as organic or inorganic.
 a. C₈H₁₈ b. CH₃NH₂
 c. CaO d. FeCO₃
113. Determine whether each compound is a hydrocarbon.
 a. H₃C—CH₂OH b. H₃C—CH₃
- c. $\text{H}_3\text{C}-\overset{\text{O}}{\parallel}\text{C}-\text{CH}_2-\text{CH}_3$ d. H₃C—NH₂

114. Determine whether each compound is a hydrocarbon.



CUMULATIVE PROBLEMS

115. How many molecules of ethanol (C₂H₅OH) (the alcohol in alcoholic beverages) are present in 145 mL of ethanol? The density of ethanol is 0.789 g/cm³.
116. A drop of water has a volume of approximately 0.05 mL. How many water molecules does it contain? The density of water is 1.0 g/cm³.
117. Determine the chemical formula of each compound and use it to calculate the mass percent composition of each constituent element.
 a. potassium chromate
 b. lead(II) phosphate
 c. cobalt(II) bromide
118. Determine the chemical formula of each compound and use it to calculate the mass percent composition of each constituent element.
 a. phosphorus pentachloride
 b. nitrogen triiodide
 c. carbon dioxide
119. A Freon™ leak in the air conditioning system of an old car releases 25 g of CF₂Cl₂ per month. What mass of chlorine does this car emit into the atmosphere each year?
120. A Freon™ leak in the air conditioning system of a large building releases 12 kg of CHF₂Cl per month. If the leak is allowed to continue, how many kilograms of Cl are emitted into the atmosphere each year?
121. A metal (M) forms a compound with the formula MCl₃. If the compound contains 65.57% Cl by mass, what is the identity of the metal?
122. A metal (M) forms an oxide with the formula M₂O. If the oxide contains 16.99% O by mass, what is the identity of the metal?
123. Estradiol is a female sexual hormone that causes maturation and maintenance of the female reproductive system. Elemental analysis of estradiol gives the following mass percent composition: C 79.37%, H 8.88%, O 11.75%. The molar mass of estradiol is 272.37 g/mol. Find the molecular formula of estradiol.
124. Fructose is a common sugar found in fruit. Elemental analysis of fructose gives the following mass percent composition: C 40.00%, H 6.72%, O 53.28%. The molar mass of fructose is 180.16 g/mol. Find the molecular formula of fructose.
125. Combustion analysis of a 13.42-g sample of equilin (which contains only carbon, hydrogen, and oxygen) produces 39.61 g CO₂ and 9.01 g H₂O. The molar mass of equilin is 268.34 g/mol. Find its molecular formula.
126. Estrone, which contains only carbon, hydrogen, and oxygen, is a female sexual hormone that occurs in the urine of pregnant women. Combustion analysis of a 1.893-g sample of estrone produces 5.545 g of CO₂ and 1.388 g H₂O. The molar mass of estrone is 270.36 g/mol. Find its molecular formula.
127. Epsom salts is a hydrated ionic compound with the following formula: MgSO₄ · x H₂O. A 4.93-g sample of Epsom salts was heated to drive off the water of hydration. The mass of the sample after complete dehydration was 2.41 g. Find the number of waters of hydration (x) in Epsom salts.
128. A hydrate of copper(II) chloride has the following formula: CuCl₂ · x H₂O. The water in a 3.41-g sample of the hydrate is driven off by heating. The remaining sample has a mass of 2.69 g. Find the number of waters of hydration (x) in the hydrate.
129. A compound of molar mass 177 g/mol contains only carbon, hydrogen, bromine, and oxygen. Analysis reveals that the compound contains 8 times as much carbon as hydrogen by mass. Find the molecular formula.
130. Researchers obtain the following data from experiments to find the molecular formula of benzocaine, a local anesthetic, which contains only carbon, hydrogen, nitrogen, and oxygen. Complete combustion of a 3.54-g sample of benzocaine with excess O₂ forms 8.49 g of CO₂ and 2.14 g H₂O. Another sample of mass 2.35 g is found to contain 0.199 g of N. The molar mass of benzocaine is found to be 165 g/mol. Find the molecular formula of benzocaine.
131. Find the total number of atoms in a sample of cocaine hydrochloride, C₁₇H₂₂ClNO₄, of mass 23.5 mg.

132. Vanadium forms four different oxides in which the percent by mass of vanadium is, respectively, (a) 76%, (b) 68%, (c) 61%, and (d) 56%. Determine the formula and the name of each one of these oxides.
133. The chloride of an unknown metal is believed to have the formula MCl_3 . A 2.395-g sample of the compound contains 3.606×10^{-2} mol Cl. Find the atomic mass of M.
134. Write the structural formulas of two different compounds that each has the molecular formula C_4H_{10} .
135. A chromium-containing compound has the formula $Fe_xCr_yO_4$ and is 28.59% oxygen by mass. Find x and y .
136. A phosphorus compound that contains 34.00% phosphorus by mass has the formula X_3P_2 . Identify the element X.
137. A particular brand of beef jerky contains 0.0552% sodium nitrite by mass and is sold in an 8.00-oz bag. What mass of sodium does the sodium nitrite contribute to the sodium content of the bag of beef jerky?
138. Phosphorus is obtained primarily from ores containing calcium phosphate. If a particular ore contains 57.8% calcium phosphate, what minimum mass of the ore must be processed to obtain 1.00 kg of phosphorus?

CHALLENGE PROBLEMS

139. A mixture of NaCl and NaBr has a mass of 2.00 g and contains 0.75 g of Na. What is the mass of NaBr in the mixture?
140. Three pure compounds form when 1.00-g samples of element X combine with, respectively, 0.472 g, 0.630 g, and 0.789 g of element Z. The first compound has the formula X_2Z_3 . Find the empirical formulas of the other two compounds.
141. A mixture of $CaCO_3$ and $(NH_4)_2CO_3$ is 61.9% CO_3 by mass. Find the mass percent of $CaCO_3$ in the mixture.
142. A mixture of 50.0 g of S and 1.00×10^2 g of Cl_2 reacts completely to form S_2Cl_2 and SCl_2 . What mass of S_2Cl_2 forms?
143. Because of increasing evidence of damage to the ozone layer, chlorofluorocarbon (CFC) production was banned in 1996. However, there are about 100 million auto air conditioners in operation that still use CFC-12 (CF_2Cl_2). These air conditioners are recharged from stockpiled supplies of CFC-12. If each of the 100 million automobiles contains 1.1 kg of CFC-12 and leaks 25% of its CFC-12 into the atmosphere per year, how much chlorine, in kg, is added to the atmosphere each year due to auto air conditioners? (Assume two significant figures in your calculations.)
144. A particular coal contains 2.55% sulfur by mass. When the coal is burned, it produces SO_2 emissions, which combine with rainwater to produce sulfuric acid. Use the formula of sulfuric acid to calculate the mass percent of S in sulfuric acid. Then determine how much sulfuric acid (in metric tons) is produced by the combustion of 1.0 metric ton of this coal. (A metric ton is 1000 kg.)
145. Lead is found in Earth's crust as several different lead ores. Suppose a certain rock is 38.0% PbS (galena), 25.0% $PbCO_3$ (cerussite), and 17.4% $PbSO_4$ (anglesite). The remainder of the rock is composed of substances containing no lead. How much of this rock (in kg) must be processed to obtain 5.0 metric tons of lead? (A metric ton is 1000 kg.)
146. A 2.52-g sample of a compound containing only carbon, hydrogen, nitrogen, oxygen, and sulfur is burned in excess oxygen to yield 4.23 g of CO_2 and 1.01 g of H_2O . Another sample of the same compound, of mass 4.14 g, yields 2.11 g of SO_3 . A third sample, of mass 5.66 g, yields 2.27 g of HNO_3 . Calculate the empirical formula of the compound. (Hint: Use the first set of data to determine % C and % H by mass. Use the second and third sets of data to determine % S and % N by mass. Then determine % O by mass by difference from 100%.)
147. A compound of molar mass 229 contains only carbon, hydrogen, iodine, and sulfur. Analysis shows that a sample of the compound contains 6 times as much carbon as hydrogen, by mass. Calculate the molecular formula of the compound.
148. The elements X and Y form a compound that is 40% X and 60% Y by mass. The atomic mass of X is twice that of Y. What is the empirical formula of the compound?
149. A compound of X and Y is $\frac{1}{3}$ X by mass. The atomic mass of element X is one-third the atomic mass of element Y. Find the empirical formula of the compound.
150. A mixture of carbon and sulfur has a mass of 9.0 g. Complete combustion with excess O_2 gives 23.3 g of a mixture of CO_2 and SO_2 . Find the mass of sulfur in the original mixture.

CONCEPTUAL PROBLEMS

151. When molecules are represented by molecular models, what does each sphere represent? How big is the nucleus of an atom in comparison to the sphere used to represent an atom in a molecular model?
152. Without doing any calculations, determine which element in each of the compounds will have the highest mass percent composition.
a. CO b. N_2O c. $C_6H_{12}O_6$ d. NH_3
153. Explain the problem with this statement and correct it: "The chemical formula for ammonia (NH_3) indicates that ammonia contains 3 grams of hydrogen to each gram of nitrogen."
154. Without doing any calculations, arrange the elements in H_2SO_4 in order of decreasing mass percent composition.

QUESTIONS FOR GROUP WORK

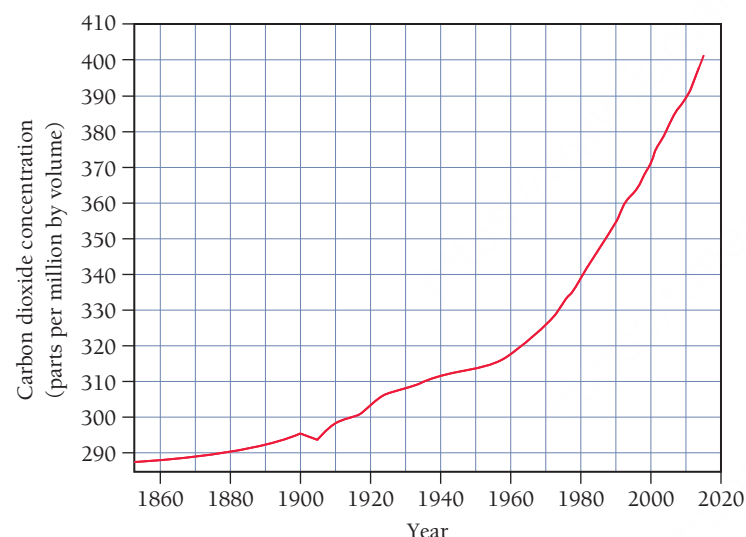
Active Classroom Learning

Discuss these questions with the group and record your consensus answer.

155. Using group members to play the roles of nuclei and electrons, demonstrate the formation of an ionic bond between Na and Cl. Demonstrate the formation of the covalent bonds in H_2O .
156. Create a flowchart with a series of simple questions that can be used to determine whether a chemical formula is that of an atomic element, a molecular element, a molecular compound, or an ionic compound. Use your flowchart to identify the correct category for P_4 , KCl , CH_4 , Ne , and NH_4NO_3 .
157. Have each member of your group list one similarity or difference between the naming conventions for ionic and the naming conventions of molecular compounds.
158. A compound isolated from the rind of lemons is 88.14% carbon and 11.86% hydrogen by mass. How many grams of C and H are there in a 100.0-g sample of this substance? How many moles of C and H? What is the empirical formula? The molar mass is determined to be 136.26 g/mol. What is the molecular formula? Which step of the process just described does your group understand the least? Which step will be most challenging for the members of your group to remember?

DATA INTERPRETATION AND ANALYSIS

159. The amount of carbon dioxide in the atmosphere has been increasing over the past century as a result of the combustion of fossil fuels (coal, oil, and natural gas). Carbon dioxide is a greenhouse gas that plays a significant role in climate. The increase in carbon dioxide is correlated with changes in climate that have climate scientists concerned. The graph shown here illustrates the increase in atmospheric carbon dioxide from 1860 to the present. Study the graph and answer the questions that follow.



▲ Atmospheric carbon dioxide concentration from 1850 to present.

- a. By how much did the level of carbon dioxide (in ppmv) increase between 1880 and the present day?
- b. What is the percent increase in the level of carbon dioxide between 1880 and the present day?
- c. Assuming that the total volume of air in the atmosphere around Earth is $5.1 \times 10^9 \text{ km}^3$ and that the concentration of CO_2 is uniform throughout this volume, what is the present-day volume of CO_2 in the atmosphere?
- d. Determine the percentage average yearly increase in atmospheric CO_2 from 1960 to the present day.
- e. If atmospheric carbon dioxide continues to increase at the rate you determined in part d, what will its concentration (in ppmv) be in the year 2040?

ANSWERS TO CONCEPTUAL CONNECTIONS

- Cc 4.1 $\text{H}-\text{O}-\text{H}$
- Cc 4.2 The spheres represent the electron cloud of the atom. It would be nearly impossible to draw a nucleus to scale on any of the space-filling molecular models in this book—on this scale, the nucleus would be too small to see.
- Cc 4.3 You would expect MgO to have the higher melting point because, in our bonding model, the magnesium and oxygen ions are held together in a crystalline lattice by charges of $2+$ for magnesium and $2-$ for oxygen. In contrast, the NaCl

lattice is held together by charges of $1+$ for sodium and $1-$ for chlorine. According to Coulomb's law, as long as the spacing between the cation and the anion in the two compounds does not differ that much, the higher charges in MgO should result in lower potential energy (more stability), and therefore a higher melting point. The experimentally measured melting points of these compounds are 801°C for NaCl and 2852°C for MgO , in accordance with the model.

- Cc 4.4 (a) NO_2^- ; (b) SO_4^{2-} ; (c) NO_3^-
- Cc 4.5 The reasons that atoms form bonds are complex. One contributing factor is the lowering of their potential energy. The octet rule is just a handy way to predict the combinations of atoms that will have a lower potential energy when they bond together.
- Cc 4.6 Choice (a) best describes the difference between ionic and molecular compounds. Answer (b) is incorrect because there are no “new” forces in bonding (just rearrangements that result in lower potential energy), and because ions do not group together in pairs in the solid phase. Answer (c) is incorrect because the main difference between ionic and molecular compounds is the way that the atoms bond. Answer (d) is incorrect because ionic compounds do not contain molecules.
- Cc 4.7 This conceptual connection addresses one of the main errors you can make in nomenclature: the failure to correctly categorize the compound. Remember that you must first determine whether the compound is an ionic compound or a molecular compound, and then name it accordingly. NCl_3 is a molecular compound (two or more nonmetals), and therefore you must use prefixes to indicate the number of each type of atom—so NCl_3 is nitrogen trichloride. The compound AlCl_3 , in contrast, is an ionic compound (metal and nonmetal), and therefore does not require prefixes—so AlCl_3 is aluminum chloride.
- Cc 4.8 (c) Atomic radii range in the hundreds of picometers, while the spheres in these models have radii of less than a centimeter. The scaling factor is therefore about 10^8 (100 million).
- Cc 4.9 $\text{C} > \text{O} > \text{H}$. Since carbon and oxygen differ in atomic mass by only 4 amu, and since there are six carbon atoms in the formula, we can conclude that carbon constitutes the greatest fraction of the mass. Oxygen is next because its mass is 16 times that of hydrogen and there are only six hydrogen atoms to every one oxygen atom.
- Cc 4.10 (c) The chemical formula for a compound gives relationships between *atoms* or *moles of atoms*. The chemical formula for water states that water molecules contain 2 H atoms to every 1 O atom or 2 mol H to every 1 mol H_2O . This *does not* imply a two-to-one relationship between *masses* of hydrogen and oxygen in water because these atoms have different masses. It also does not imply a two-to-one relationship between volumes.

- 5.1** Morphine: A Molecular Impostor 205
- 5.2** Electronegativity and Bond Polarity 206
- 5.3** Writing Lewis Structures for Molecular Compounds and Polyatomic Ions 210
- 5.4** Resonance and Formal Charge 212
- 5.5** Exceptions to the Octet Rule: Odd-Electron Species, Incomplete Octets, and Expanded Octets 217

- 5.6** Bond Energies and Bond Lengths 220
- 5.7** VSEPR Theory: The Five Basic Shapes 223
- 5.8** VSEPR Theory: The Effect of Lone Pairs 227
- 5.9** VSEPR Theory: Predicting Molecular Geometries 231
- 5.10** Molecular Shape and Polarity 235
- Key Learning Outcomes** 241



Morphinan (a morphine analog) binding to an opioid receptor (based on research done by Brian Kobilka (1955–) and coworkers at Stanford University). Morphine is derived from the sap of the opium poppy.

CHAPTER

5

Chemical Bonding I

Drawing Lewis Structures and Determining Molecular Shapes

CHEMICAL BONDING IS AT THE HEART of chemistry. In this book, we examine three different theories for chemical bonding. Recall from Section 4.4

that bonding theories explain why atoms bond together to form molecules and predict many of the properties (such as the shapes) of molecules. Therefore, bonding theories play an important role in helping us to see the relationship between the structure of a molecule and its properties. The first and simplest bonding theory is the Lewis model, which we introduced in Chapter 4 and expand upon in this chapter. With just a few

dots, dashes, and chemical symbols, the Lewis model helps us to understand and predict a myriad of chemical observations. The Lewis model, combined with a theory called *valence shell electron pair repulsion theory* (VSEPR), allows us to predict the shapes of molecules. The other two bonding theories are valence bond theory and molecular orbital theory, which we will cover in Chapter 6.

“A geometrical and mechanical basis of the physical science cannot be constructed until we know the forms, sizes, and positions of the molecules of substances.”

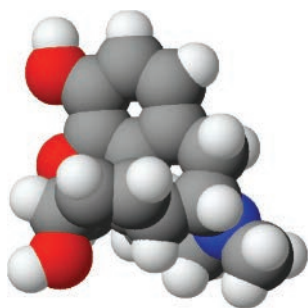
—George Gore (1826–1908)

5.1 Morphine: A Molecular Impostor

Morphine—a drug named after Morpheus, the Greek god of dreams—is the silver bullet in the human arsenal against pain. Morphine is often prescribed after surgery to aid recovery or to alleviate the severe pain associated with illnesses such as cancer. It is also prescribed to patients who have chronic pain toward the end of their lives. For these patients, prescribed morphine provides relief from an otherwise tortuous existence.

Morphine is a natural product derived from the sap of the opium poppy. The effects of opium sap have been known for thousands of years, but morphine itself was not isolated from opium until the early 1800s. Morphine acts by binding to receptors (called opioid receptors) that exist within nerve cells. When morphine binds to an opioid receptor, the transmission of nerve signals is altered, resulting in less pain, sedation, and feelings of euphoria and tranquility.

Why do humans (and other mammals) have receptors within their nerve cells that bind to molecules derived from the sap of a plant? Researchers long suspected that these receptors must also bind other molecules as well; otherwise, why would the receptors exist? In the 1970s, researchers discovered some of



Morphine

▲ *Endogenous* means produced within the organism.

Proteins are among the most important biological molecules and serve many functions in living organisms.

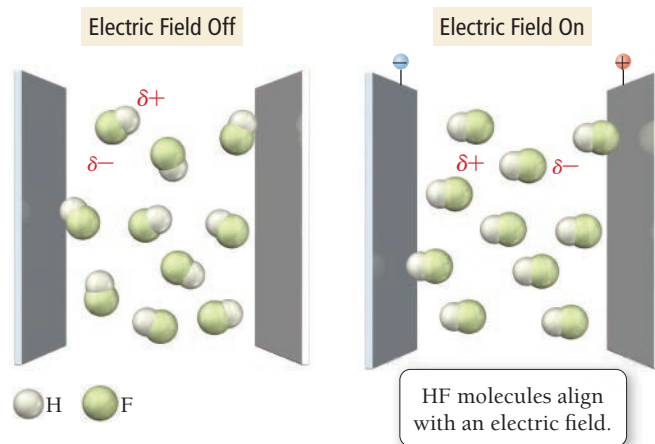
these molecules, known as endorphins (short for **endogenous morphine**). Endorphins are the body's natural painkillers. Our bodies naturally produce endorphins during periods of pain such as childbirth or intense exercise. Endorphins are at least partially responsible for the so-called runner's high, a feeling of well-being that often follows an athlete's intense workout.

Morphine binds to opioid receptors because it fits into a special pocket (called the active site) on the opioid receptor protein (just as a key fits into a lock) that normally binds endorphins. Certain parts of the morphine molecule have a similar enough shape to endorphins that they fit the lock (even though they are not the original key). In other words, morphine is a *molecular impostor*, mimicking the action of endorphins because of similarities in shape.

The lock-and-key fit between the active site of a protein and a particular molecule is important not only to our perception of pain, but to many other biological functions as well. Immune response, the sense of smell, the sense of taste, and many types of drug action depend on shape-specific interactions between molecules and proteins. Our ability to determine the shapes of key biological molecules is largely responsible for the revolution that has occurred in biology over the last 50 years.

In this chapter, we look at ways to predict and account for the shapes of molecules. The molecules we examine are much smaller than the protein molecules we just discussed, but the same principles apply to both. The simple model we examine to account for molecular shape is valence shell electron pair repulsion (VSEPR) theory, and in this chapter we use it in conjunction with the Lewis model to make important predictions about the shapes of molecules.

5.2 Electronegativity and Bond Polarity

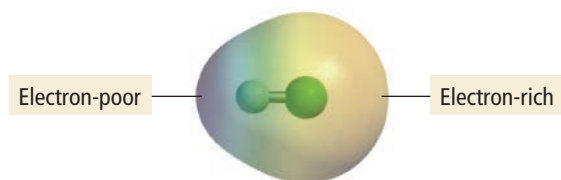
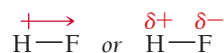


▲ **FIGURE 5.1 Orientation of Gaseous Hydrogen Fluoride in an Electric Field** Because the hydrogen side of the HF molecule has a slight positive charge and the fluorine side a slight negative charge, the molecules align themselves with an external electric field.

In Chapter 4 we introduced the Lewis model for chemical bonding. In the Lewis model, we represent valence electrons with dots and draw Lewis structures that show how atoms attain octets by sharing electrons with other atoms. The shared electrons are covalent chemical bonds. However, we know from quantum mechanics (introduced in Chapter 2) that representing electrons with dots, as we do in the Lewis model, is a drastic oversimplification. This does not invalidate the Lewis model—which is an extremely useful theory—but we must recognize and compensate for its inherent limitations. One limitation of representing electrons as dots, and covalent bonds as two dots shared between two atoms, is that the shared electrons always appear to be *equally* shared. Such is not the case. For example, consider the Lewis structure of hydrogen fluoride:



The two shared electron dots sitting between the H and the F atoms appear to be equally shared between hydrogen and fluorine. However, based on laboratory measurements, we know they are not. When HF is put in an electric field, the molecules orient as shown in **Figure 5.1** ◀. From this observation, we know that the hydrogen side of the molecule must have a slight positive charge and the fluorine side of the molecule must have a slight negative charge. We represent this partial separation of charge as follows:



▲ **FIGURE 5.2 Electrostatic Potential Map for the HF Molecule** Red indicates electron-rich regions, and blue indicates electron-poor regions.

The red arrow above the hydrogen, with a positive sign on the tail, indicates that the left side of the molecule has a partial positive charge and that the right side of the molecule (the side the arrow is pointing *toward*) has a partial negative charge. Similarly, the red $\delta+$ (delta plus) on the H—F structure on the right represents a partial positive charge, and the red $\delta-$ (delta minus) represents a partial negative charge.

Does this make the bond ionic? No. In an ionic bond, the electron is essentially *transferred* from one atom to another. In HF, the electron is *unequally shared*. In other words, even though the Lewis structure of HF portrays the bonding electrons as residing *between* the two atoms, in reality the electron density is greater on the fluorine atom than on the hydrogen atom (**Figure 5.2** ◀). The bond is said to be *polar*—having a positive pole and a negative pole. A **polar covalent bond** is

intermediate in nature between a pure covalent bond and an ionic bond. In fact, the categories of pure covalent and ionic are really two extremes within a broad continuum. Most covalent bonds between dissimilar atoms are actually *polar covalent*, somewhere between the two extremes.

Electronegativity

The ability of an atom to attract electrons to itself in a chemical bond (which results in polar and ionic bonds) is **electronegativity**. We say that fluorine is more *electronegative* than hydrogen because it takes a greater share of the electron density in HF.

Electronegativity was quantified by the American chemist Linus Pauling (1901–1994) in his classic book, *The Nature of the Chemical Bond*. Pauling compared the bond energy—the energy required to break a bond—of a heteronuclear diatomic molecule such as HF with the bond energies of its homonuclear counterparts. In this case, he compared HF with H₂ and F₂. The bond energies of H₂ and F₂ are 436 kJ/mol and 155 kJ/mol, respectively. Pauling reasoned that if the HF bond were purely covalent—that is, if the electrons were shared equally—the bond energy of HF should simply be an average of the bond energies of H₂ and F₂, which would be 296 kJ/mol. However, the bond energy of HF is experimentally measured to be 565 kJ/mol. Pauling suggested that the additional bond energy was due to the *ionic character* of the bond.

Based on many such comparisons of bond energies, and by arbitrarily assigning an electronegativity of 4.0 to fluorine (the most electronegative element on the periodic table), Pauling developed the electronegativity values shown in **Figure 5.3**.

For main-group elements, notice the following periodic trends in electronegativity in Figure 5.3:

- Electronegativity generally increases across a period in the periodic table.
- Electronegativity generally decreases down a column in the periodic table.
- Fluorine is the most electronegative element.
- Francium is the least electronegative element (sometimes called the most *electropositive*).

We cover the concept of bond energy in more detail in Section 5.6.

Pauling's "average" bond energy was actually calculated a little bit differently than the normal average shown in Figure 5.3. He took the square root of the product of the bond energies of the homonuclear counterparts as the "average."

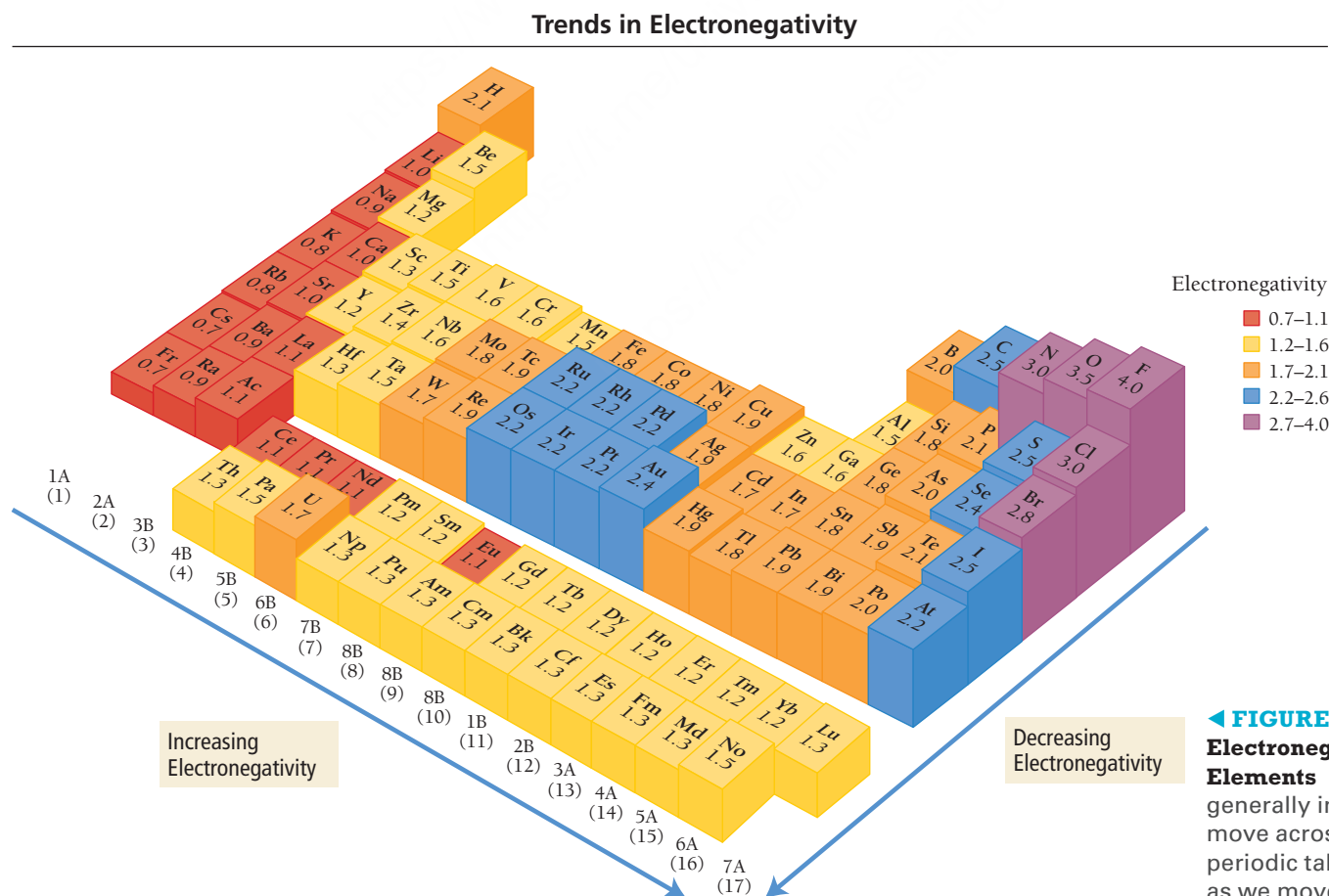


FIGURE 5.3
Electronegativities of the Elements Electronegativity generally increases as we move across a row in the periodic table and decreases as we move down a column.

The periodic trends in electronegativity are consistent with other periodic trends we have seen. In general, electronegativity is inversely related to atomic size—the larger the atom, the less ability it has to attract electrons to itself in a chemical bond.



5.1 Cc

Conceptual
Connection

Periodic Trends in Electronegativity

Arrange these elements in order of decreasing electronegativity: P, Na, N, Al.

Bond Polarity, Dipole Moment, and Percent Ionic Character

The degree of polarity in a chemical bond depends on the electronegativity difference (sometimes abbreviated ΔEN) between the two bonding atoms. The greater the electronegativity difference, the more polar the bond. If two atoms with identical electronegativities form a covalent bond, they share the electrons equally, and the bond is purely covalent or *nonpolar*.

For example, the chlorine molecule (shown at left), composed of two chlorine atoms (which necessarily have identical electronegativities), has a covalent bond in which electrons are evenly shared.

If there is a large electronegativity difference between the two atoms in a bond, such as normally occurs between a metal and a nonmetal, the electron from the metal is almost completely transferred to the nonmetal, and the bond is ionic. For example, sodium and chlorine form an ionic bond.

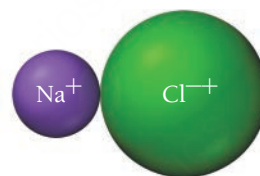

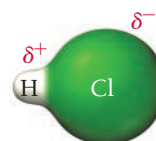


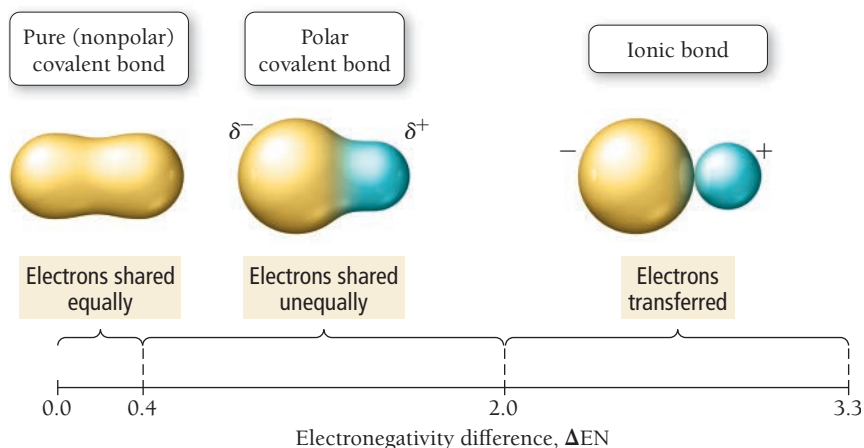
TABLE 5.1 The Effect of Electronegativity Difference on Bond Type

Electronegativity Difference (ΔEN)	Bond Type	Example
Small (0–0.4)	Covalent	Cl_2
Intermediate (0.4–2.0)	Polar covalent	HCl
Large (2.0+)	Ionic	NaCl

If there is an intermediate electronegativity difference between the two atoms, such as between two different nonmetals, then the bond is polar covalent. For example, HCl has a polar covalent bond.



The Continuum of Bond Types



While all attempts to divide the bond polarity continuum into specific regions are necessarily arbitrary, it is helpful to classify bonds as covalent, polar covalent, and ionic, based on the electronegativity difference between the bonding atoms as shown in Table 5.1 and **Figure 5.4**. The bond between C and H lies at the border between covalent and polar covalent; however, this bond—which is very important in organic chemistry—is normally considered covalent (nonpolar).

We quantify the polarity of a bond by the size of its dipole moment. A **dipole moment** (μ) occurs anytime there is a separation of positive and negative charge. The magnitude of a dipole moment created by separating two particles of equal but opposite charges of magnitude q by a distance r is given by the equation:

$$\mu = qr \quad [5.1]$$

We can get a sense for the dipole moment of a completely ionic bond by calculating the dipole moment that results from

FIGURE 5.4 Electronegativity Difference (ΔEN) and Bond Type

separating a proton and an electron ($q = 1.6 \times 10^{-19} \text{ C}$) by a distance of $r = 130 \text{ pm}$ (the approximate length of a short chemical bond).

$$\begin{aligned}\mu &= qr \\ &= (1.6 \times 10^{-19} \text{ C})(130 \times 10^{-12} \text{ m}) \\ &= 2.1 \times 10^{-29} \text{ C} \cdot \text{m} \\ &= 6.2 \text{ D}\end{aligned}$$

The debye (D) is the unit commonly used for reporting dipole moments ($1 \text{ D} = 3.34 \times 10^{-30} \text{ C} \cdot \text{m}$). Based on this calculation, we would expect the dipole moment of completely ionic bonds with bond lengths close to 130 pm to be about 6 D, and that is in fact the case (the dipole moment for LiF is 6.33 D, as you can see in Table 5.2). The smaller the magnitude of the charge separation, and the smaller the distance between the charges, the smaller the dipole moment. Table 5.2 lists the dipole moments of several molecules along with the electronegativity differences between their atoms.

By comparing the *actual* dipole moment of a bond to what the dipole moment would be if the electron were completely transferred from one atom to the other, we can get a sense of the degree to which the electron is transferred (or the degree to which the bond is ionic). The **percent ionic character** is the ratio of a bond's actual dipole moment to the dipole moment it would have if the electron were completely transferred from one atom to the other, multiplied by 100%.

$$\text{percent ionic character} = \frac{\text{measured dipole moment of bond}}{\text{dipole moment if electron were completely transferred}} \times 100\%$$

For example, suppose a diatomic molecule with a bond length of 130 pm has a dipole moment of 3.5 D. We previously calculated that separating a proton and an electron by 130 pm results in a dipole moment of 6.2 D. Therefore, the percent ionic character of the bond is 56%:

$$\begin{aligned}\text{percent ionic character} &= \frac{3.5 \text{ D}}{6.2 \text{ D}} \times 100\% \\ &= 56\%\end{aligned}$$

A bond in which an electron is completely transferred from one atom to another would have 100% ionic character (although even the most ionic bonds do not reach this ideal). **Figure 5.5** shows the percent ionic character of a number of diatomic gaseous molecules plotted against the electronegativity difference between the bonding atoms. As expected, the percent ionic character generally increases as the electronegativity difference increases. However, as we can see, no bond is 100% ionic. In general, bonds with greater than 50% ionic character are referred to as ionic bonds.

EXAMPLE 5.1

Classifying Bonds as Pure Covalent, Polar Covalent, or Ionic

Is the bond between each pair of atoms covalent, polar covalent, or ionic?

- (a) Sr and F (b) N and Cl (c) N and O

SOLUTION

- (a) In Figure 5.3, find the electronegativity of Sr (1.0) and of F (4.0). The electronegativity difference (ΔEN) is $\Delta \text{EN} = 4.0 - 1.0 = 3.0$. According to Table 5.1, this bond is ionic.
- (b) In Figure 5.3, find the electronegativity of N (3.0) and of Cl (3.0). The electronegativity difference (ΔEN) is $\Delta \text{EN} = 3.0 - 3.0 = 0$. According to Table 5.1, this bond is covalent.
- (c) In Figure 5.3, find the electronegativity of N (3.0) and of O (3.5). The electronegativity difference (ΔEN) is $\Delta \text{EN} = 3.5 - 3.0 = 0.5$. According to Table 5.1, this bond is polar covalent.

FOR PRACTICE 5.1

Is the bond between each pair of atoms pure covalent, polar covalent, or ionic?

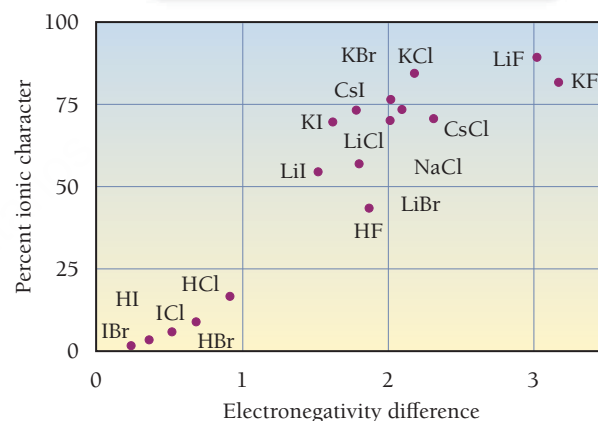
- (a) I and I (b) Cs and Br (c) P and O

We cover bond lengths in more detail in Section 5.6.


TABLE 5.2 Dipole Moments of Several Molecules in the Gas Phase

Molecule	ΔEN	Dipole Moment (D)
Cl_2	0	0
CIF	1.0	0.88
HF	1.9	1.82
LiF	3.0	6.33

Percent ionic character increases with electronegativity difference.



▲ FIGURE 5.5 Percent Ionic Character versus Electronegativity Difference for Some Compounds



Conceptual Connection

Percent Ionic Character

The HCl(g) molecule has a bond length of 127 pm and a dipole moment of 1.08 D. Without doing detailed calculations, determine which is the best estimate for its percent ionic character.

- (a) 5% (b) 15% (c) 50% (d) 80%



KEY CONCEPT VIDEO
Writing Lewis Structures for Molecular Compounds

5.3 Writing Lewis Structures for Molecular Compounds and Polyatomic Ions

In Chapter 4 we saw how the Lewis model can be used to describe ionic and covalent bonds, and in Section 5.2 we saw how some covalent bonds are polar. We now turn to the basic sequence of steps involved in writing Lewis structures for given combinations of atoms.

Writing Lewis Structures for Molecular Compounds

To write a Lewis structure for a molecular compound, follow these steps:

- Write the correct skeletal structure for the molecule.** The Lewis structure of a molecule must have the atoms in the correct positions. For example, you could not write a Lewis structure for water if you started with the hydrogen atoms next to each other and the oxygen atom at the end (HHO). In nature, oxygen is the central atom and the hydrogen atoms are *terminal* (at the ends). The correct skeletal structure is HOH. The only way to determine the skeletal structure of a molecule with absolute certainty is to examine its structure experimentally.
However, you can write likely skeletal structures by remembering two guidelines. First, *hydrogen atoms are always terminal*. Hydrogen does not ordinarily occur as a central atom because central atoms must form at least two bonds, and hydrogen, which has only a single valence electron to share and requires only a duet, can form just one. Second, *put the more electronegative elements in terminal positions and the less electronegative elements (other than hydrogen) in the central position*. Later in this chapter, you will learn how to distinguish between competing skeletal structures by applying the concept of formal charge.
- Calculate the total number of electrons for the Lewis structure by summing the valence electrons of each atom in the molecule.** Remember that the number of valence electrons for any main-group element is equal to its group number in the periodic table. *If you are writing a Lewis structure for a polyatomic ion, you must consider the charge of the ion when calculating the total number of electrons.* Add one electron for each negative charge and subtract one electron for each positive charge. Don't worry about which electron comes from which atom—only the total number is important.
- Distribute the electrons among the atoms, giving octets (or duets in the case of hydrogen) to as many atoms as possible.** Begin by placing two electrons between every two atoms. These represent the minimum number of bonding electrons. Then distribute the remaining electrons as lone pairs, first to terminal atoms and then to the central atom, giving octets (or duets for hydrogen) to as many atoms as possible.
- If any atoms lack an octet, form double or triple bonds as necessary to give them octets.** Do this by moving lone electron pairs from terminal atoms into the bonding region with the central atom.
- Check.** Count the number of electrons in the Lewis structure. The total should equal the number from Step 2.

The left column in the examples that follow contains an abbreviated version of the procedure for writing Lewis structures; the center and right columns contain two examples of applying the procedure.

Often, chemical formulas are written in a way that provides clues to how the atoms are bonded together. For example, CH_3OH indicates that three hydrogen atoms and the oxygen atom are bonded to the carbon atom but the fourth hydrogen atom is bonded to the oxygen atom.

There are a few exceptions to this rule, such as diborane (B_2H_6), which contains *bridging hydrogens*, but these are rare and cannot be adequately addressed by the Lewis model.

Sometimes distributing all the remaining electrons to the central atom results in more than an octet. This is called an expanded octet and is covered in Section 5.5.

Interactive Worked
Example Video 5.2

PROCEDURE FOR Writing Lewis Structures for Covalent Compounds

1. Write the correct skeletal structure for the molecule.

2. Calculate the total number of electrons for the Lewis structure by summing the valence electrons of each atom in the molecule.

3. Distribute the electrons among the atoms, giving octets (or duets for hydrogen) to as many atoms as possible. Begin with the bonding electrons and then proceed to lone pairs on terminal atoms and finally to lone pairs on the central atom.

4. If any atom lacks an octet, form double or triple bonds as necessary to give them octets.

5. **Check.** Count the number of electrons in the Lewis structure. The total should equal the number from Step 2.

EXAMPLE 5.2

Writing Lewis Structures

Write the Lewis structure for CO_2 .

SOLUTION

Because carbon is the less electronegative atom, put it in the central position.



Total number of electrons for Lewis structure =

$$\left(\begin{array}{c} \text{number of} \\ \text{valence} \\ \text{e}^- \text{ for C} \end{array} \right) + 2 \left(\begin{array}{c} \text{number of} \\ \text{valence} \\ \text{e}^- \text{ for O} \end{array} \right)$$

$$= 4 + 2(6) = 16$$

Bonding electrons are first.



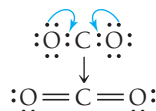
(4 of 16 electrons used)

Lone pairs on terminal atoms are next.



(16 of 16 electrons used)

Since carbon lacks an octet, move lone pairs from the oxygen atoms to bonding regions to form double bonds.



The Lewis structure has 16 electrons as calculated in Step 2.

FOR PRACTICE 5.2

Write the Lewis structure for CO .

EXAMPLE 5.3

Writing Lewis Structures

Write the Lewis structure for NH_3 .

SOLUTION

Since hydrogen is always terminal, put nitrogen in the central position.



Total number of electrons for Lewis structure =

$$\left(\begin{array}{c} \text{number of} \\ \text{valence} \\ \text{e}^- \text{ for N} \end{array} \right) + 3 \left(\begin{array}{c} \text{number of} \\ \text{valence} \\ \text{e}^- \text{ for H} \end{array} \right)$$

$$= 5 + 3(1) = 8$$

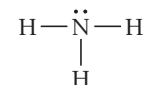
Bonding electrons are first.



(6 of 8 electrons used)

Lone pairs on terminal atoms are next, but none are needed on hydrogen.

Lone pairs on central atom are last.



(8 of 8 electrons used)

Since all of the atoms have octets (or duets for hydrogen), the Lewis structure for NH_3 is complete, as shown in the previous step.

The Lewis structure has 8 electrons as calculated in Step 2.

FOR PRACTICE 5.3

Write the Lewis structure for H_2CO .

The eText 2.0 icon indicates that this feature is embedded and interactive in the eText.

Writing Lewis Structures for Polyatomic Ions

Write Lewis structures for polyatomic ions by following the same procedure, but pay special attention to the charge of the ion when calculating the number of electrons for the Lewis structure. Add one electron for each negative charge and subtract one electron for each positive charge. Write the Lewis structure for a polyatomic ion within brackets with the charge of the ion in the upper right-hand corner, outside the bracket.

EXAMPLE 5.4

Writing Lewis Structures for Polyatomic Ions

Interactive
Worked Example
Video 5.4



Write the Lewis structure for the NH_4^+ ion.

SOLUTION

Begin by writing the skeletal structure. Since hydrogen is always terminal, put the nitrogen atom in the central position.



Calculate the total number of electrons for the Lewis structure by summing the number of valence electrons for each atom and subtracting 1 electron for the $1+$ charge.

$$\begin{aligned} \text{Total number of electrons for Lewis structure} &= (\text{number of valence } e^- \text{ in N}) + (\text{number of valence } e^- \text{ in H}) - 1 \\ &= 5 + 4(1) + 1 \\ &= 8 \end{aligned}$$

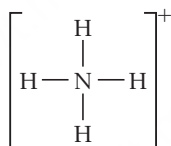
Subtract 1 e^- to account for $1+$ charge of ion.

Place two bonding electrons between every two atoms. Since all of the atoms have complete octets, no double bonds are necessary.




(8 of 8 electrons used)

Write the Lewis structure in brackets with the charge of the ion in the upper right-hand corner.



FOR PRACTICE 5.4

Write the Lewis structure for the hypochlorite ion, ClO^- .



KEY CONCEPT VIDEO
Resonance and Formal Charge

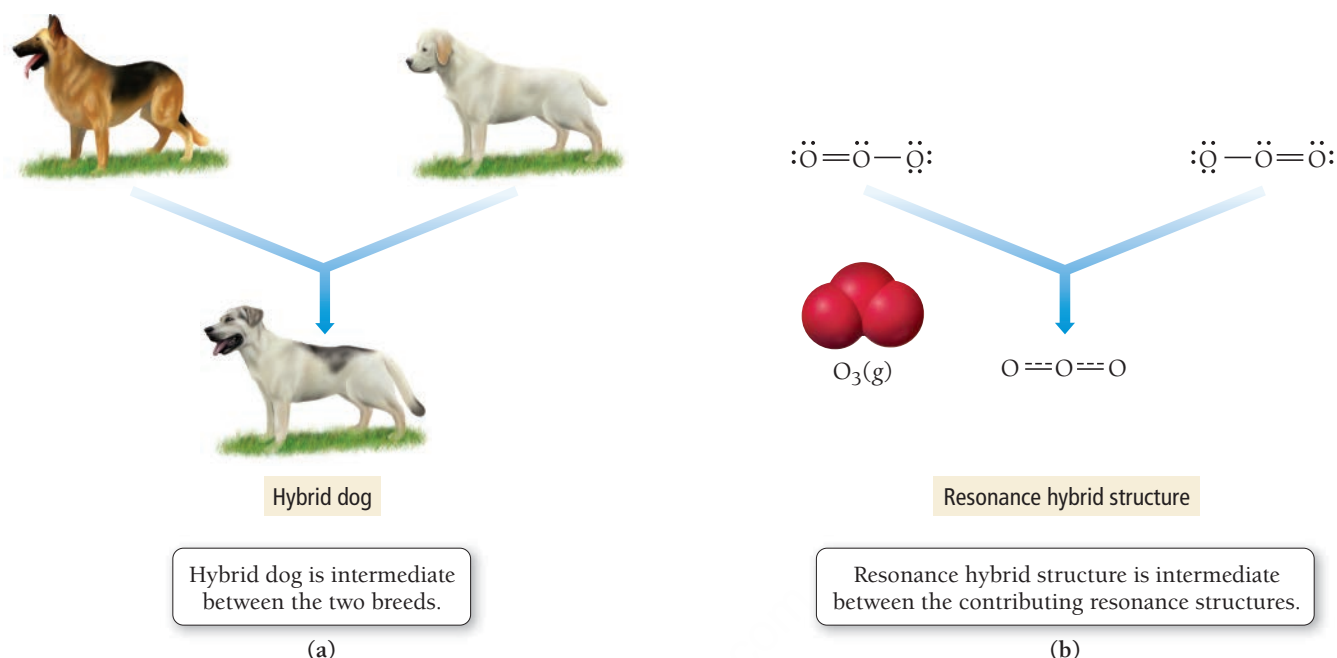
5.4 Resonance and Formal Charge

We need two additional concepts to write the best possible Lewis structures for a large number of compounds. The concepts are *resonance*, used when two or more valid Lewis structures can be drawn for the same compound, and *formal charge*, an electron bookkeeping system that allows us to discriminate between alternative Lewis structures.

Resonance


For some molecules, we can write more than one valid Lewis structure. For example, consider writing a Lewis structure for O_3 . The following two Lewis structures, with the double bond on alternate sides, are equally correct:





▲ **FIGURE 5.6 Hybridization** Just as the offspring of two different dog breeds is a hybrid that is intermediate between the two breeds (a), the structure of a resonance hybrid is intermediate between that of the contributing resonance structures (b).

In cases such as this—where we can write two or more valid Lewis structures for the same molecule—we find that, in nature, the molecule exists as an *average* of the two Lewis structures. Both of the Lewis structures for O_3 predict that O_3 contains two different bonds (one double bond and one single bond). However, when we experimentally examine the structure of O_3 , we find that the bonds in the O_3 molecule are equivalent and that each bond is intermediate in strength and length between a double bond and single bond. We account for this by representing the molecule with both structures, called *resonance structures*, with a double-headed arrow between them:



A **resonance structure** is one of two or more Lewis structures that have the same skeletal formula (the atoms are in the same locations) but different electron arrangements. The actual structure of the molecule is intermediate between the two (or more) resonance structures and is called a **resonance hybrid**. The term *hybrid* comes from breeding and means the offspring of two animals or plants of different varieties or breeds. If we breed a Labrador retriever with a German shepherd, we get a *hybrid* that is intermediate between the two breeds (**Figure 5.6a** ▲). Similarly, the actual structure of a resonance hybrid is intermediate between the two resonance structures (**Figure 5.6b** ▲). The only structure that actually exists is the hybrid structure. The individual resonance structures do not exist and are merely a convenient way to describe the actual structure. Notice that the actual structure of ozone has two equivalent bonds and a bent geometry (we discuss molecular geometries in more detail later in this chapter).


The concept of resonance is an adaptation of the Lewis model that helps account for the complexity of actual molecules. In the Lewis model, electrons are *localized* either on one atom (lone pair) or between atoms (bonding pair). However, in nature, electrons in molecules are often *delocalized* over several atoms or bonds. The delocalization of electrons lowers their energy; it stabilizes them (for reasons that are beyond the scope of this book). Resonance depicts two or more structures with the electrons in different places in an attempt to more accurately reflect the delocalization of electrons. In the real hybrid structure—an average between the resonance structures—the electrons are more spread out (or delocalized) than in any of the resonance structures. The resulting stabilization of the electrons (that is, the lowering of their potential energy due to delocalization) is sometimes called *resonance stabilization*. Resonance stabilization makes an important contribution to the stability of many molecules.

EXAMPLE 5.5

Writing Resonance Structures

Interactive
Worked Example
Video 5.5PEARSON
eText
2.0Write the Lewis structure for the NO_3^- ion. Include resonance structures.

SOLUTION

Begin by writing the skeletal structure. Since nitrogen is the least electronegative atom, put it in the central position.	$\begin{array}{c} \text{O} \\ \text{O N O} \end{array}$
Calculate the total number of electrons for the Lewis structure by summing the number of valence electrons for each atom and adding 1 electron for the $1-$ charge.	<p>Total number of electrons for Lewis structure $= (\text{number of valence } e^- \text{ in N}) + 3 (\text{number of valence } e^- \text{ in O}) + 1$ $= 5 + 3(6) + 1$ $= 24$</p> <p style="text-align: right;">Add 1 e^- to account for $1-$ charge of ion.</p>
Place two bonding electrons between each pair of atoms.	$\begin{array}{c} \text{O} \\ \text{O}:\ddot{\text{N}}:\text{O} \end{array}$ <p>(6 of 24 electrons used)</p>
Distribute the remaining electrons, first to terminal atoms. There are not enough electrons to complete the octet on the central atom.	$\begin{array}{c} :\ddot{\text{O}}: \\ :\ddot{\text{O}}:\ddot{\text{N}}:\ddot{\text{O}}: \end{array}$ <p>(24 of 24 electrons used)</p>
Form a double bond by moving a lone pair from one of the oxygen atoms into the bonding region with nitrogen. Enclose the structure in brackets and include the charge.	$\left[\begin{array}{c} :\ddot{\text{O}}: \\ :\ddot{\text{O}}:\ddot{\text{N}}::\ddot{\text{O}}: \end{array} \right]^-$ <p style="text-align: center;">or</p> $\left[\begin{array}{c} :\ddot{\text{O}}: \\ :\ddot{\text{O}}-\text{N}=\ddot{\text{O}}: \end{array} \right]^-$
Since the double bond can form equally well with any of the three oxygen atoms, write all three structures as resonance structures. (The actual space-filling model of NO_3^- is shown here for comparison. Note that all three bonds are equal in length.)	$\left[\begin{array}{c} :\ddot{\text{O}}: \\ :\ddot{\text{O}}-\text{N}=\ddot{\text{O}}: \end{array} \right]^- \longleftrightarrow \left[\begin{array}{c} :\text{O}: \\ :\ddot{\text{O}}-\text{N}=\ddot{\text{O}}: \end{array} \right]^- \longleftrightarrow \left[\begin{array}{c} :\ddot{\text{O}}: \\ :\ddot{\text{O}}=\text{N}-\ddot{\text{O}}: \end{array} \right]^-$ <div style="text-align: center;">  <p>NO_3^-</p> </div>

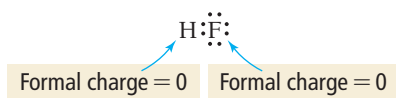
FOR PRACTICE 5.5

Write the Lewis structure for the NO_2^- ion. Include resonance structures.

In the examples of resonance hybrids that we have examined so far, the contributing structures have been equivalent (or equally valid) Lewis structures. In these cases, the true structure is an equally weighted average of the resonance structures. In some cases, however, we can write resonance structures that are not equivalent. For reasons we cover in the material that follows—such as formal charge, for example—one possible resonance structure may be somewhat better (more closely representative of the actual molecule) than another. In such cases, the true structure is still an average of the resonance structures, but the better resonance structure contributes more to the true structure. In other words, multiple nonequivalent resonance structures may be weighted differently in their contributions to the true overall structure of a molecule (see Example 5.6).

Formal Charge

Formal charge is a fictitious charge assigned to each atom in a Lewis structure that helps us to distinguish among competing Lewis structures. The **formal charge** of an atom in a Lewis structure is *the charge it would have if all bonding electrons were shared equally between the bonded atoms*. In other words, formal charge is the calculated charge for an atom in a molecule if we completely ignore the effects of electronegativity. For example, we know that because fluorine is more electronegative than hydrogen, HF has a dipole moment. The hydrogen atom has a slight positive charge, and the fluorine atom has a slight negative charge. However, the *formal charges* of hydrogen and fluorine in HF (the calculated charges if we ignore their differences in electronegativity) are both zero.



We can calculate the formal charge on any atom as the difference between the number of valence electrons in the atom and the number of electrons that it “owns” in a Lewis structure. An atom in a Lewis structure can be thought of as “owning” all of its nonbonding electrons and one-half of its bonding electrons.

formal charge = number of valence electrons –

(number of nonbonding electrons + $\frac{1}{2}$ number of bonding electrons)

So the formal charge of hydrogen in HF is 0:

$$\text{formal charge} = 1 - \left[0 + \frac{1}{2}(2) \right] = 0$$

Number of valence electrons for H Number of electrons that H “owns” in the Lewis structure

Similarly, we calculate the formal charge of fluorine in HF as 0:

$$\text{formal charge} = 7 - \left[6 + \frac{1}{2}(2) \right] = 0$$

Number of valence electrons for F Number of electrons that F “owns” in the Lewis structure

The concept of formal charge is useful because it can help us distinguish between competing skeletal structures or competing resonance structures. In general, these four rules apply:

1. The sum of all formal charges in a neutral molecule must be zero.
2. The sum of all formal charges in an ion must equal the charge of the ion.
3. Small (or zero) formal charges on individual atoms are better than large ones.
4. When formal charge cannot be avoided, negative formal charge should reside on the most electronegative atom.

Let’s apply the concept of formal charge to distinguish between possible skeletal structures for the molecule formed by H, C, and N. The three atoms can bond with C in the center (HCN) or N in the center (HNC). The following table shows the two possible structures and the corresponding formal charges.

	Structure A			Structure B		
	H—C≡N:			H—N≡C:		
number of valence e [−]	1	4	5	1	5	4
– number of nonbonding e [−]	−0	−0	−2	−0	−0	−2
− $\frac{1}{2}$ (number of bonding e [−])	− $\frac{1}{2}$ (2)	− $\frac{1}{2}$ (8)	− $\frac{1}{2}$ (6)	− $\frac{1}{2}$ (2)	− $\frac{1}{2}$ (8)	− $\frac{1}{2}$ (6)
Formal charge	0	0	0	0	+1	−1

The sum of the formal charges for each of these structures is zero (as it always must be for neutral molecules). However, Structure B has formal charges on both the N atom and the C atom, while Structure A has no formal charges on any atom. Furthermore, in Structure B, the negative formal charge is not on

Both HCN and HNC exist, but—as we predicted by assigning formal charges—HCN is more stable than HNC.

the most electronegative element (nitrogen is more electronegative than carbon). Consequently, Structure A is the better Lewis structure. Since atoms in the middle of a molecule tend to have more bonding electrons and fewer nonbonding electrons, they also tend to have more positive formal charges. Consequently, the best skeletal structure usually has the least electronegative atom in the central position, as we learned in Step 1 of our procedure for writing Lewis structures in Section 5.3.

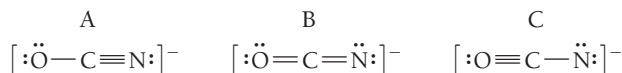
EXAMPLE 5.6

Assigning Formal Charges

Interactive
Worked Example
Video 5.6

PEARSON
eText
2.0

Assign formal charges to each atom in the resonance forms of the cyanate ion (OCN^-). Which resonance form is likely to contribute most to the correct structure of OCN^- ?



SOLUTION

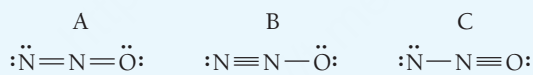
Calculate the formal charge on each atom by finding the number of valence electrons and subtracting the number of nonbonding electrons and one-half the number of bonding electrons.

	A [$\ddot{\text{O}} - \text{C} \equiv \text{N:}$] $^-$			B [$\ddot{\text{O}} = \text{C} = \ddot{\text{N}}$] $^-$			C [$\text{:O} \equiv \text{C} - \ddot{\text{N}}$] $^-$		
number of valence e^-	6	4	5	6	4	5	6	4	5
– number of nonbonding e^-	–6	–0	–2	–4	–0	–4	–2	–0	–6
$-\frac{1}{2}(\text{number of bonding } e^-)$	–1	–4	–3	–2	–4	–2	–3	–4	–1
Formal charge	–1	0	0	0	0	–1	+1	0	–2

The sum of all formal charges for each structure is -1 , as it should be for a 1^- ion. Structures A and B have the least amount of formal charge and are therefore to be preferred over Structure C. Structure A is preferable to B because it has the negative formal charge on the more electronegative atom. You would therefore expect Structure A to make the biggest contribution to the resonance forms of the cyanate ion.

FOR PRACTICE 5.6

Assign formal charges to each atom in the resonance forms of N_2O . Which resonance form is likely to contribute most to the correct structure of N_2O ?



FOR MORE PRACTICE 5.6

Assign formal charges to each of the atoms in the nitrate ion (NO_3^-). The Lewis structure for the nitrate ion is shown in Example 5.5.

EXAMPLE 5.7

Drawing Resonance Structures and Assigning Formal Charge for Organic Compounds

Draw the Lewis structure (including resonance structures) for nitromethane (CH_3NO_2). For each resonance structure, assign formal charges to all atoms that have formal charge.

SOLUTION

Begin by writing the skeletal structure. For organic compounds, the condensed structural formula (in this case CH_3NO_2) indicates how the atoms are connected.



Calculate the total number of electrons for the Lewis structure by summing the valence electrons for each atom.	Total number of electrons for Lewis structure $= (\# \text{ valence } e^- \text{ in C}) + 3(\# \text{ valence } e^- \text{ in H}) + (\# \text{ valence } e^- \text{ in N}) + 2(\# \text{ valence } e^- \text{ in O})$ $= 4 + 3(1) + 5 + 2(6)$ $= 24$
Place a dash between each pair of atoms to indicate a bond. Each dash counts for two electrons.	$\begin{array}{c} \text{H} \quad \text{O} \\ \quad \\ \text{H}-\text{C}-\text{N}-\text{O} \\ \\ \text{H} \end{array}$ (12 of 24 electrons used)
Distribute the remaining electrons, first to terminal atoms, then to interior atoms.	$\begin{array}{c} \text{H} \quad :\ddot{\text{O}}: \\ \quad \\ \text{H}-\text{C}-\text{N}-\ddot{\text{O}}: \\ \\ \text{H} \end{array}$ (24 of 24 electrons used)
If there are not enough electrons to complete the octets on the interior atoms, form double bonds by moving lone pair electrons from terminal atoms into the bonding region with interior atoms.	$\begin{array}{c} \text{H} \quad :\ddot{\text{O}}: \\ \quad \\ \text{H}-\text{C}-\text{N}-\ddot{\text{O}}: \\ \\ \text{H} \end{array}$
Draw any necessary resonance structures by moving only electron dots. (In this case, you can form a double bond between the nitrogen atom and the other oxygen atom.)	$\begin{array}{c} \text{H} \quad :\ddot{\text{O}}: \\ \quad \\ \text{H}-\text{C}-\text{N}=\ddot{\text{O}}: \end{array} \longleftrightarrow \begin{array}{c} \text{H} \quad :\ddot{\text{O}}: \\ \quad \\ \text{H}-\text{C}-\text{N}-\ddot{\text{O}}: \\ \\ \text{H} \end{array}$
Assign formal charges (fc) to each atom. $\text{fc} = \# \text{ valence } e^- - (\# \text{ nonbonding } e^- + \frac{1}{2} \# \text{ bonding } e^-)$	$\begin{array}{c} \text{H} \quad :\ddot{\text{O}}:^{-1} \\ \quad \\ \text{H}-\text{C}-\text{N}^{+1}=\ddot{\text{O}}: \end{array} \longleftrightarrow \begin{array}{c} \text{H} \quad :\ddot{\text{O}}: \\ \quad \\ \text{H}-\text{C}-\text{N}^{+1}-\ddot{\text{O}}:^{-1} \\ \\ \text{H} \end{array}$ Carbon, hydrogen, and the doubly bonded oxygen atoms have no formal charge. Nitrogen has a +1 formal charge $[5 - \frac{1}{2}(8)]$, and the singly bonded oxygen atom in each resonance structure has a -1 formal charge $[6 - (6 + \frac{1}{2}(2))]$.

FOR PRACTICE 5.7

Draw the Lewis structure (including resonance structures) for diazomethane (CH_2N_2). For each resonance structure, assign formal charges to all atoms that have formal charge.

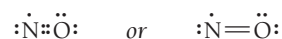
5.5 Exceptions to the Octet Rule: Odd-Electron Species, Incomplete Octets, and Expanded Octets

The octet rule in the Lewis model has some exceptions, which we examine in this section. They include (1) *odd-electron species*, molecules or ions with an odd number of electrons; (2) *incomplete octets*, molecules or ions with *fewer than eight electrons* around an atom; and (3) *expanded octets*, molecules or ions with *more than eight electrons* around an atom.

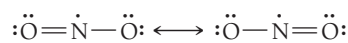
The unpaired electron in nitrogen monoxide is put on the nitrogen rather than the oxygen in order to minimize formal charges.

Odd-Electron Species


Molecules and ions with an odd number of electrons in their Lewis structures are **free radicals** (or simply *radicals*). For example, nitrogen monoxide—a pollutant found in motor vehicle exhaust—has 11 electrons. If we try to write a Lewis structure for nitrogen monoxide, we can't achieve octets for both atoms:



The nitrogen atom does not have an octet, so this Lewis structure does not satisfy the octet rule. Yet, nitrogen monoxide exists, especially in polluted air. Why? As with any simple theory, the Lewis model is not sophisticated enough to handle every single case. We can't write good Lewis structures for free radicals; nevertheless, some of these molecules exist in nature. It is a testament to the Lewis model, however, that *relatively few* such molecules exist and that, in general, they tend to be somewhat unstable and reactive. NO, for example, reacts with oxygen in the air to form NO₂, another odd-electron molecule represented with the following 17-electron resonance structures:



In turn, NO₂ reacts with water to form nitric acid (a component of acid rain) and also reacts with other atmospheric pollutants to form peroxyacetylnitrate (PAN), an active component of photochemical smog. For free radicals, such as NO and NO₂, we simply write the best Lewis structure that we can.



5.3 Cc

Conceptual Connection

Odd-Electron Species

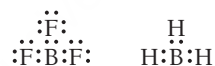
Which molecule would you expect to be a free radical?

- (a) CO (b) CO₂ (c) N₂O (d) ClO

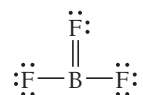
Beryllium compounds, such as BeH₂, also have incomplete octets.

Incomplete Octets

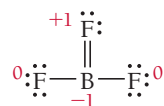
Another significant exception to the octet rule involves those elements that tend to form *incomplete octets*. The most important of these is boron, which forms compounds with only six electrons, rather than eight. For example, BF₃ and BH₃ lack an octet for B:



You might be wondering why we don't just form double bonds to increase the number of electrons around B. For BH₃, of course, we can't because there are no additional electrons to move into the bonding region. For BF₃, however, we could attempt to give B an octet by moving a lone pair from an F atom into the bonding region with B:



This Lewis structure has octets for all atoms, including boron. However, when we assign formal charges to this structure, we get a negative formal charge on B and a positive formal charge on F:

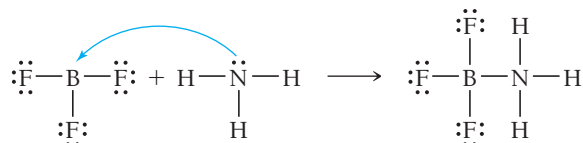


The positive formal charge on fluorine—the most electronegative element in the periodic table—makes this an unfavorable structure. This leaves us with some questions. Do we complete the octet on B at the expense of giving fluorine a positive formal charge? Or do we leave B without an octet in order to avoid the positive formal charge on fluorine?

The answers to these kinds of questions are not always clear because we are pushing the limits of the Lewis model. In the case of boron, we usually accept the incomplete octet as the better Lewis structure. However, doing so does not rule out the possibility that the Lewis structure with the double bond might be a minor contributing resonance structure. The ultimate answers to these kinds of questions

must be determined from experiments. Experimental measurements of the B—F bond length in BF_3 suggest that the bond may be slightly shorter than expected for a single B—F bond, indicating that it may indeed have a small amount of double-bond character.

BF_3 can complete its octet in another way—via a chemical reaction. The Lewis model predicts that BF_3 might react in ways that would complete its octet, and indeed it does. For example, BF_3 reacts with NH_3 as follows:

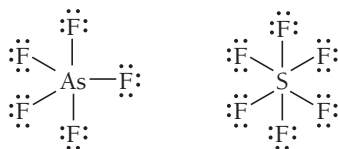


The product has complete octets for all atoms in the structure.

When nitrogen bonds to boron, the nitrogen atom provides both of the electrons. This kind of bond is a *coordinate covalent bond*, which we will discuss in Chapter 22.

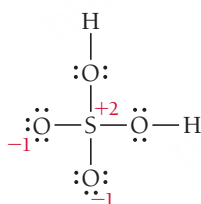
Expanded Octets

Elements in the third row of the periodic table and beyond often exhibit *expanded octets* of up to 12 (and occasionally 14) electrons. Consider the Lewis structures of arsenic pentafluoride and sulfur hexafluoride:

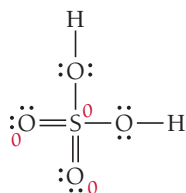


In AsF_5 arsenic has an expanded octet of 10 electrons, and in SF_6 sulfur has an expanded octet of 12 electrons. Both of these compounds exist and are stable. Ten- and 12-electron expanded octets are common in third-period elements and beyond. This is because the *d* orbitals in these elements are energetically accessible (they are not much higher in energy than the orbitals occupied by the valence electrons) and can accommodate the extra electrons (see Section 3.3). Expanded octets *never* occur in second-period elements because they do not have energetically accessible *d* orbitals and therefore never exhibit expanded octets.

In some Lewis structures, we must decide whether or not to expand an octet in order to lower formal charge. For example, consider the Lewis structure of H_2SO_4 :



Notice that both of the oxygen atoms have a -1 formal charge and that sulfur has a $+2$ formal charge. While this amount of formal charge is acceptable, especially since the negative formal charge resides on the more electronegative atom, it is possible to eliminate the formal charge by expanding the octet on sulfur:



Which of these two Lewis structures for H_2SO_4 is better? Again, the answer is not straightforward. Experiments show that the sulfur–oxygen bond lengths in the two sulfur–oxygen bonds without the hydrogen atoms are shorter than expected for sulfur–oxygen single bonds, indicating that the Lewis

structure with double bonds plays an important role in describing the bonding in H_2SO_4 . In general, we expand octets in third-row (or beyond) elements in order to lower formal charge. However, we should *never* expand the octets of second-row elements.

EXAMPLE 5.8**Writing Lewis Structures for Compounds Having Expanded Octets**

Interactive
Worked Example
Video 5.8



Write the Lewis structure for XeF_2 .

SOLUTION

Begin by writing the skeletal structure. Since xenon is the less electronegative atom, put it in the central position.	FXeF
Calculate the total number of electrons for the Lewis structure by summing the number of valence electrons for each atom.	Total number of electrons for Lewis structure = (number of valence e^- in Xe) + 2(number of valence e^- in F) $= 8 + 2(7)$ $= 22$
Place two bonding electrons between the atoms of each pair of atoms.	$\text{F}:\text{Xe}:\text{F}$ (4 of 22 electrons used)
Distribute the remaining electrons to give octets to as many atoms as possible, beginning with terminal atoms and finishing with the central atom. Arrange additional electrons around the central atom, giving it an expanded octet of up to 12 electrons.	$:\ddot{\text{F}}:\text{Xe}:\ddot{\text{F}}:$ (16 of 22 electrons used) $:\ddot{\text{F}}:\ddot{\text{Xe}}:\ddot{\text{F}}:$ or $:\ddot{\text{F}}-\ddot{\text{Xe}}-\ddot{\text{F}}:$ (22 of 22 electrons used)

FOR PRACTICE 5.8

Write the Lewis structure for XeF_4 .

FOR MORE PRACTICE 5.8

Write the Lewis structure for H_3PO_4 . If necessary, expand the octet on any appropriate atoms to lower formal charge.



Conceptual
Connection

5.4 Expanded Octets

Which molecule could have an expanded octet?

- (a) H_2CO_3
- (b) H_3PO_4
- (c) HNO_2

5.6 Bond Energies and Bond Lengths

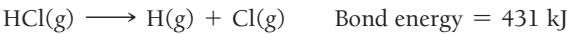
In the Lewis model, a bond is a shared electron pair; when we draw Lewis structures for molecular compounds, all bonds appear identical. However, from experiments we know that they are not identical—they can vary both in their energy (how strong the bond is) and their length. In this section, we examine the concepts of bond energy and bond length for a number of commonly encountered bonds. In Chapter 9 we will learn how to use these bond energies to calculate energy changes occurring in chemical reactions.

Bond Energy

The **bond energy** of a chemical bond is the energy required to break 1 mole of the bond in the gas phase. For example, the bond energy of the Cl—Cl bond in Cl₂ is 243 kJ/mol. Bond energies are positive because energy must be put into a molecule to break a bond (the process is endothermic, which, as discussed in Chapter E, absorbs heat and carries a positive sign).



The bond energy of HCl is 431 kJ/mol.

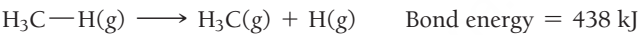


We say that the HCl bond is *stronger* than the Cl₂ bond because it requires more energy to break it. In general, compounds with stronger bonds tend to be more chemically stable, and therefore less chemically reactive, than compounds with weaker bonds. The triple bond in N₂ has a bond energy of 946 kJ/mol.

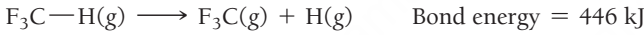


It is a very strong and stable bond, which explains nitrogen’s relative inertness.

The bond energy of a particular bond in a polyatomic molecule is a little more difficult to determine because a particular type of bond can have different bond energies in different molecules. For example, consider the C—H bond. In CH₄, the energy required to break one C—H bond is 438 kJ/mol.



However, the energy required to break a C—H bond in other molecules varies slightly, as shown here:



We can calculate an *average bond energy* for a chemical bond, which is an average of the bond energies for that bond in a large number of compounds. For the limited number of compounds we just listed, we calculate an average C—H bond energy of 422 kJ/mol.

Table 5.3 lists average bond energies for a number of common chemical bonds averaged over a large number of compounds. Notice that the C—H bond energy listed is 414 kJ/mol, which is not too different from the value we calculated from our limited number of compounds. Notice also that bond energies depend not only on the kind of atoms involved in the bond, but also on the type of bond: single, double, or triple. In general, for a given pair of atoms, triple bonds are stronger than double bonds, which are, in turn, stronger than single bonds. For example in Table 5.3, for carbon–carbon bonds, notice the increase in bond energy in going from a single to a double and then to a triple bond.

TABLE 5.3 Average Bond Energies

Bond	Bond Energy (kJ/mol)	Bond	Bond Energy (kJ/mol)	Bond	Bond Energy (kJ/mol)
H—H	436	C—C	347	N≡N	946
H—C	414	C=C	611	O—O	142
H—N	389	C≡C	837	O=O	498
H—O	464	C—O	360	F—F	159
H—F	565	C=O	736*	Cl—Cl	243
H—Cl	431	C—Cl	339	Br—Br	193
H—Br	364	N—N	163	I—I	151
H—I	297	N=N	418		

*799 in CO₂

Bond energy is also called bond enthalpy or bond dissociation energy.

Bond Length

Just as we can tabulate average bond energies, which represent the average energy of a bond between two particular atoms in a large number of compounds, we can tabulate average bond lengths (Table 5.4). The average **bond length** represents the average length of a bond between two particular atoms in a large number of compounds. Like bond energies, bond lengths depend not only on the kind of atoms involved in the bond, but also on the type of bond: single, double, or triple. In general, for a particular pair of atoms, triple bonds are shorter than double bonds, which are in turn shorter than single bonds. For example, consider the bond lengths (shown here with bond energies, repeated from earlier in this section) of carbon–carbon triple, double, and single bonds:

Bond	Bond Length (pm)	Bond Energy (kJ/mol)
$\text{C}\equiv\text{C}$	120 pm	837 kJ/mol
$\text{C}=\text{C}$	134 pm	611 kJ/mol
$\text{C}-\text{C}$	154 pm	347 kJ/mol

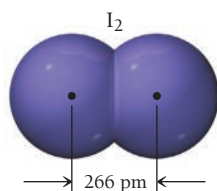
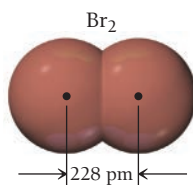
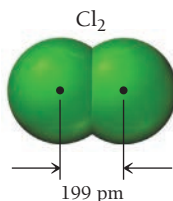
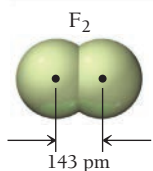
Notice that, as the bond gets longer, it also becomes weaker. This relationship between the length of a bond and the strength of a bond does not necessarily hold true for all bonds. Consider the following series of nitrogen–halogen single bonds:

Bond	Bond Length (pm)	Bond Energy (kJ/mol)
$\text{N}-\text{F}$	139	272
$\text{N}-\text{Cl}$	191	200
$\text{N}-\text{Br}$	214	243
$\text{N}-\text{I}$	222	159

Although the bonds generally get weaker as they get longer, the trend is not a smooth one.

In this chapter, we look at ways to predict and account for the shapes of molecules. The molecules we examine are much smaller than the molecules we discussed in Section 5.1, but the same principles apply to both. The simple model we examine to account for molecular shape is VSEPR theory, and we use it in conjunction with the Lewis model. In Chapter 6 we will explore two additional bonding theories: valence bond theory and molecular orbital theory. These bonding theories are more complex, but also more powerful, than the Lewis model. They predict and account for molecular shape as well as other properties of molecules.

Bond lengths



▲ Bond lengths in the diatomic halogen molecules.

TABLE 5.4 Average Bond Lengths

Bond	Bond Length (pm)	Bond	Bond Length (pm)	Bond	Bond Length (pm)
$\text{H}-\text{H}$	74	$\text{C}-\text{C}$	154	$\text{N}\equiv\text{N}$	110
$\text{H}-\text{C}$	110	$\text{C}=\text{C}$	134	$\text{O}-\text{O}$	145
$\text{H}-\text{N}$	100	$\text{C}\equiv\text{C}$	120	$\text{O}=\text{O}$	121
$\text{H}-\text{O}$	97	$\text{C}-\text{O}$	143	$\text{F}-\text{F}$	143
$\text{H}-\text{F}$	92	$\text{C}=\text{O}$	120	$\text{Cl}-\text{Cl}$	199
$\text{H}-\text{Cl}$	127	$\text{C}-\text{Cl}$	178	$\text{Br}-\text{Br}$	228
$\text{H}-\text{Br}$	141	$\text{N}-\text{N}$	145	$\text{I}-\text{I}$	266
$\text{H}-\text{I}$	161	$\text{N}=\text{N}$	123		

5.7 VSEPR Theory: The Five Basic Shapes

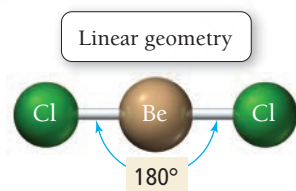
Valence shell electron pair repulsion (VSEPR) theory is based on the simple idea that **electron groups**—which we define as lone pairs, single bonds, multiple bonds, and even single electrons—repel one another through coulombic forces (see Section 3.3). The electron groups, of course, are also attracted to the nucleus (otherwise the molecule would fall apart), but VSEPR theory focuses on the repulsions. According to VSEPR theory, the repulsions between electron groups on *interior atoms* (or the central atom) of a molecule determine the geometry of the molecule (**Figure 5.7** ▶). The preferred geometry of a molecule is the one in which the electron groups have the maximum separation (and therefore the minimum energy) possible. Consequently, for molecules having just one interior atom (the central atom), molecular geometry depends on (a) the number of electron groups around the central atom and (b) how many of those electron groups are bonding groups and how many are lone pairs. In this section, we first look at the molecular geometries associated with two to six electron groups around the central atom when all of those groups are bonding groups (single or multiple bonds). The resulting geometries constitute the five basic shapes of molecules. We will then consider how these basic shapes are modified if one or more of the electron groups are lone pairs.

Two Electron Groups: Linear Geometry

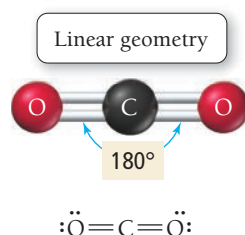
Consider the Lewis structure of BeCl_2 , which has two electron groups (two single bonds) about the central atom:



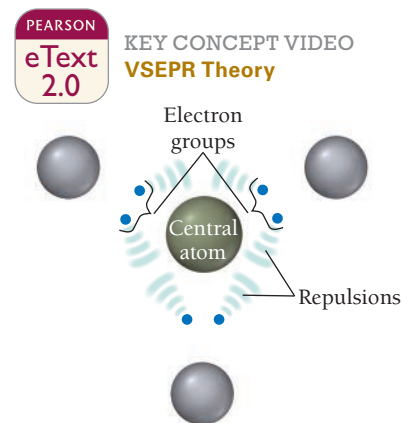
According to VSEPR theory, the geometry of BeCl_2 is determined by the repulsion between these two electron groups, which maximize their separation by assuming a 180° bond angle or a **linear geometry**. Experimental measurements of the geometry of BeCl_2 indicate that the molecule is indeed linear, as predicted by the theory.



Molecules that form only two single bonds, with no lone pairs, are rare because they do not follow the octet rule. However, the same geometry is observed in all molecules that have two electron groups (and no lone pairs). Consider the Lewis structure of CO_2 , which has two electron groups (the double bonds) around the central carbon atom:



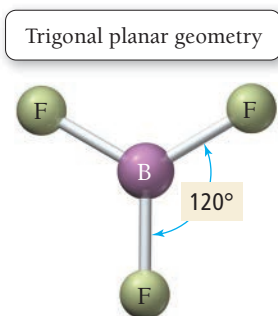
According to VSEPR theory, the two double bonds repel each other (just as the two single bonds in BeCl_2 repel each other), resulting in a linear geometry for CO_2 . Experimental observations confirm that CO_2 is indeed a linear molecule.



▲ FIGURE 5.7 Repulsion between Electron Groups The basic idea of VSEPR theory is that repulsions between electron groups determine molecular geometry.

Recall that beryllium often forms incomplete octets, as it does in this structure.

A double bond counts as one electron group.



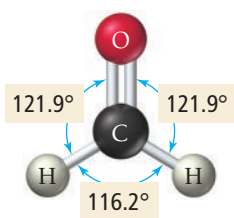
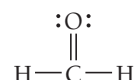
Three Electron Groups: Trigonal Planar Geometry

The Lewis structure of BF_3 (another molecule with an incomplete octet) has three electron groups around the central atom:



These three electron groups maximize their separation by assuming 120° bond angles in a plane—a **trigonal planar geometry** (see Figure 5.7). Experimental observations of the structure of BF_3 again confirm the predictions of VSEPR theory.

Another molecule with three electron groups, formaldehyde, has one double bond and two single bonds around the central atom:



PEARSON
eText
2.0

5.5
Cc

Conceptual
Connection

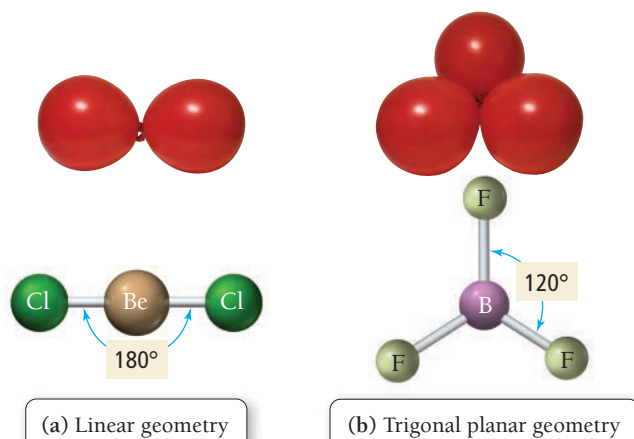
Electron Groups and Molecular Geometry

In determining electron geometry, why do we consider only the electron groups on the central atom? Why don't we consider electron groups on terminal atoms?

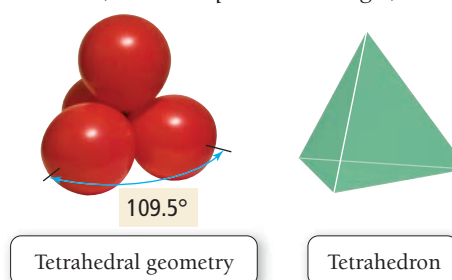
Four Electron Groups: Tetrahedral Geometry

The VSEPR geometries of molecules with two or three electron groups around the central atom are two-dimensional and therefore can easily be visualized and represented on paper. For molecules with four or more electron groups around the central atom, the geometries are three-dimensional and are therefore more difficult to imagine and draw. One common way to help visualize these basic shapes is by analogy to balloons tied together.

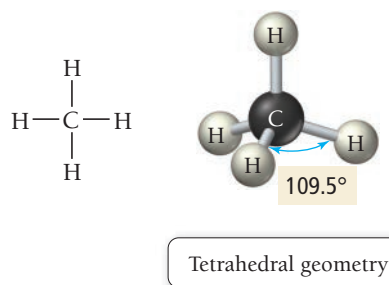
In this analogy, each electron group around a central atom is like a balloon tied to a central point. The bulkiness of the balloons causes them to spread out as much as possible, much as the repulsion between electron groups causes them to position themselves as far apart as possible. For example, if you tie two balloons together, they assume a roughly linear arrangement, as shown in **Figure 5.8a** ◀, analogous to the linear geometry of BeCl_2 that we just examined. Keep in mind that the balloons do not represent atoms, but *electron groups*. Similarly, if you tie three balloons together—in analogy to three electron groups—they assume a trigonal planar geometry, as shown in **Figure 5.8b** ◀, much like the BF_3 molecule. If you tie *four* balloons together, however, they assume a three-dimensional **tetrahedral geometry** with 109.5° angles between the balloons. That is, the balloons point toward the vertices of a *tetrahedron*—a geometrical shape with four identical faces, each an equilateral triangle, as shown here:



▲ **FIGURE 5.8 Representing Electron Geometry with Balloons** (a) The bulkiness of balloons causes them to assume a linear arrangement when two of them are tied together. Similarly, the repulsion between two electron groups produces a linear geometry. (b) Like three balloons tied together, three electron groups adopt a trigonal planar geometry.



Methane is an example of a molecule with four electron groups around the central atom:



For four electron groups, the tetrahedron is the three-dimensional shape that allows the maximum separation among the groups. The repulsions among the four electron groups in the C—H bonds cause the molecule to assume the tetrahedral shape. When we write the Lewis structure of CH₄ on paper, it may seem that the molecule should be square planar, with bond angles of 90°. However, in three dimensions, the electron groups can get farther away from each other by forming the tetrahedral geometry, as illustrated in our balloon analogy.

Molecular Geometry

5.6

Cc

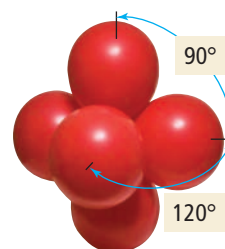
Conceptual
Connection

What is the geometry of the HCN molecule? Its Lewis structure is H—C≡N:


- (a) Linear (b) Trigonal planar (c) Tetrahedral

Five Electron Groups: Trigonal Bipyramidal Geometry

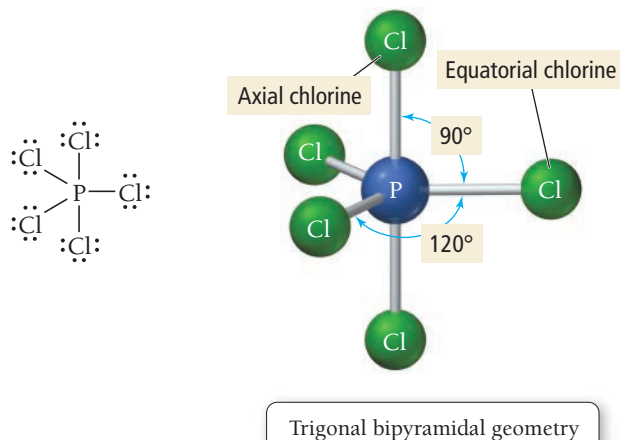
Five electron groups around a central atom assume a **trigonal bipyramidal geometry**, like five balloons tied together. In this structure, three of the groups lie in a single plane, as in the trigonal planar configuration, while the other two are positioned above and below this plane. The angles in the trigonal bipyramidal structure are not all the same. The angles between the *equatorial positions* (the three bonds in the trigonal plane) are 120°, while the angle between the *axial positions* (the two bonds on either side of the trigonal plane) and the trigonal plane is 90°. As an example of a molecule with five electron groups around the central atom, consider PCl₅:



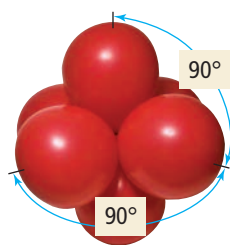
Trigonal bipyramidal geometry




Trigonal bipyramid



The three equatorial chlorine atoms are separated by 120° bond angles, and the two axial chlorine atoms are separated from the equatorial atoms by 90° bond angles.



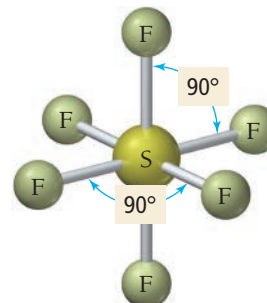
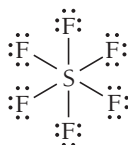
Octahedral geometry



Octahedron

Six Electron Groups: Octahedral Geometry

Six electron groups around a central atom assume an **octahedral geometry**, like six balloons tied together. In this structure—named after the eight-sided geometrical shape called the octahedron—four of the groups lie in a single plane, with a fifth group above the plane and another below it. The angles in this geometry are all 90° . As an example of a molecule with six electron groups around the central atom, consider SF_6 :



Octahedral geometry

The structure of this molecule is highly symmetrical; all six bonds are equivalent.

EXAMPLE 5.9

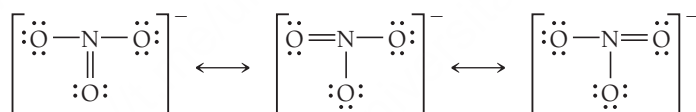
VSEPR Theory and the Basic Shapes

Determine the molecular geometry of NO_3^- .

SOLUTION

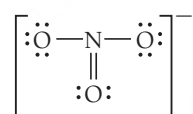
The molecular geometry of NO_3^- is determined by the number of electron groups around the central atom (N). Begin by drawing the Lewis structure of NO_3^- .

NO_3^- has $5 + 3(6) + 1 = 24$ valence electrons. The Lewis structure is as follows:



The hybrid structure is intermediate between these three and has three equivalent bonds.

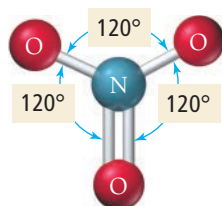
Use any one of the resonance structures to determine the number of electron groups around the central atom.



The nitrogen atom has three electron groups.

Based on the number of electron groups, determine the geometry that minimizes the repulsions between the groups.

The electron geometry that minimizes the repulsions between three electron groups is trigonal planar.



Since the three bonds are equivalent (because of the resonance structures), they each exert the same repulsion on the other two and the molecule has three equal bond angles of 120° .

FOR PRACTICE 5.9

Determine the molecular geometry of CCl_4 .

5.8 VSEPR Theory: The Effect of Lone Pairs

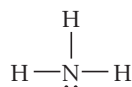
Each of the examples we looked at in Section 5.7 had only bonding electron groups around the central atom. What happens in molecules that have lone pairs around the central atom as well? The lone pairs also repel other electron groups, as we see in the examples that follow.



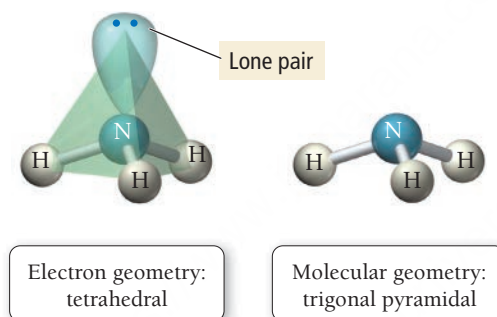
KEY CONCEPT VIDEO
VSEPR Theory: The
Effect of Lone Pairs

Four Electron Groups with Lone Pairs

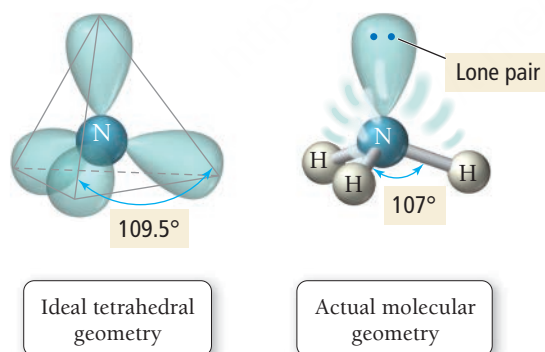
Consider the Lewis structure of ammonia:



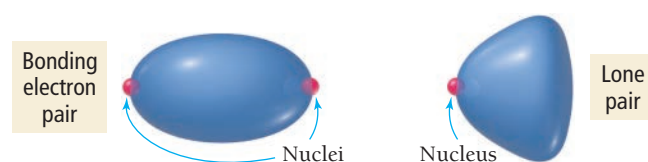
The central nitrogen atom has four electron groups (one lone pair and three bonding pairs) that repel each other. If we do not distinguish between bonding electron groups and lone pairs, we find that the **electron geometry**—the geometrical arrangement of the *electron groups*—is still tetrahedral, as we expect for four electron groups. However, the **molecular geometry**—the geometrical arrangement of the atoms—is **trigonal pyramidal**, as shown here:



Notice that although the electron geometry and the molecular geometry are different, *the electron geometry is relevant to the molecular geometry*. The lone pair exerts its influence on the bonding pairs.

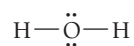


As we noted previously, different kinds of electron groups generally result in different amounts of repulsion. Lone pair electrons generally exert slightly greater repulsions than bonding electrons. If all four electron groups in NH_3 exerted equal repulsions on one another, the bond angles in the molecule would all be the ideal tetrahedral angle, 109.5° . However, the actual angle between $\text{N}-\text{H}$ bonds in ammonia is slightly smaller, 107° . A lone electron pair is more spread out in space than a bonding electron pair because a lone pair is attracted to only one nucleus while a bonding pair is attracted to two (**Figure 5.9** ▶). The lone pair occupies more of the angular space around a nucleus, exerting a greater repulsive force on neighboring electrons and compressing the $\text{N}-\text{H}$ bond angles.

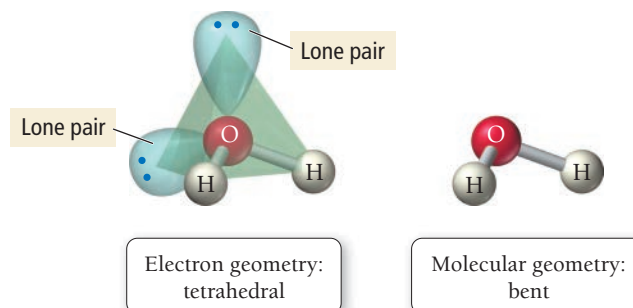


▲ **FIGURE 5.9 Nonbonding versus Bonding Electron Pairs** A lone electron pair occupies more angular space than a bonding pair.

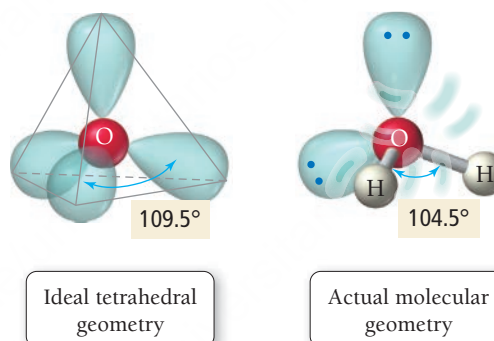
We see a similar effect in water. The Lewis structure of water has two bonding pairs and two lone pairs:



Since it has four electron groups, water's *electron geometry* is tetrahedral (like that of ammonia), but its *molecular geometry* is **bent**.



As in NH_3 , the bond angles in H_2O are smaller (104.5°) than the ideal tetrahedral bond angles because of the greater repulsion exerted by the lone pair electrons. The bond angle in H_2O is even smaller than that in NH_3 because H_2O has *two* lone pairs of electrons on the central oxygen atom. These lone pairs compress the H_2O bond angle to a greater extent than in NH_3 :



In general, electron group repulsions vary as follows:

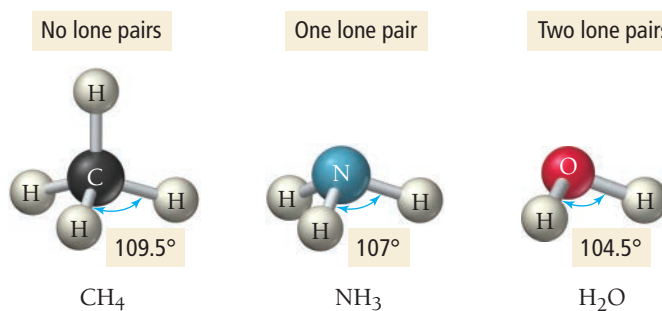


Most repulsive

Least repulsive

We see the effects of this ordering in the progressively smaller bond angles of CH_4 , NH_3 , and H_2O , as shown in **Figure 5.10** ▼. The relative ordering of repulsions also helps to determine the geometry of molecules with five and six electron groups when one or more of those groups are lone pairs.

Effect of Lone Pairs on Molecular Geometry

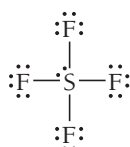


► **FIGURE 5.10 The Effect of Lone Pairs on Molecular Geometry** The bond angles get progressively smaller as the number of lone pairs on the central atom increases from zero in CH_4 to one in NH_3 to two in H_2O .

Bond angle gets progressively smaller.

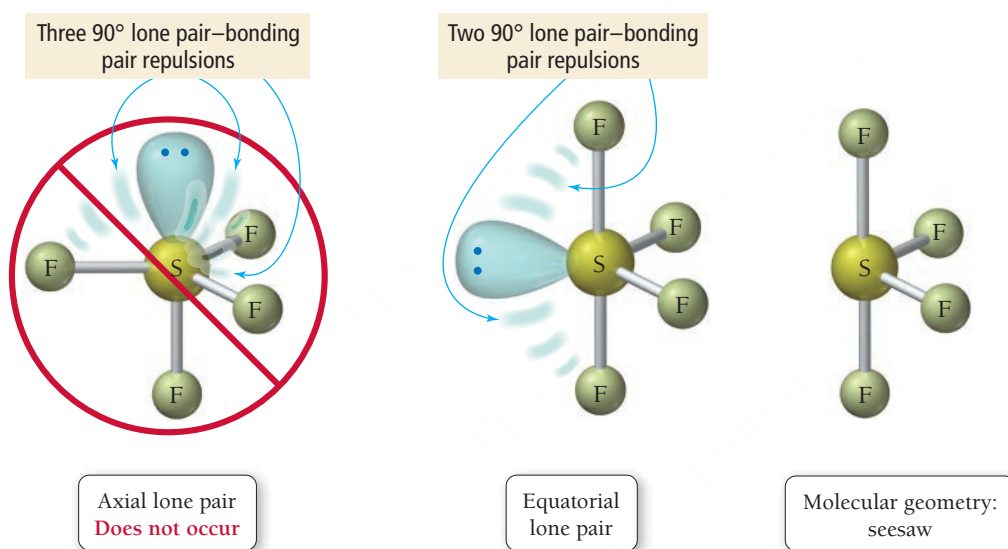
Five Electron Groups with Lone Pairs

Consider the Lewis structure of SF_4 :

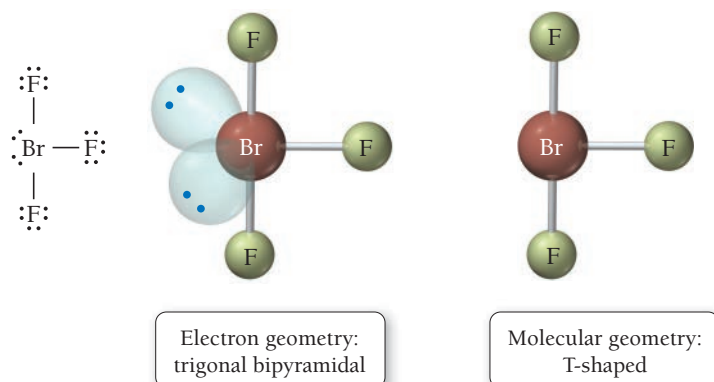


The central sulfur atom has five electron groups (one lone pair and four bonding pairs). The *electron geometry*, due to the five electron groups, is trigonal bipyramidal. In determining the molecular geometry, notice that the lone pair could occupy either an equatorial position or an axial position within the trigonal bipyramidal electron geometry. Which position is more favorable? To answer this question, we must consider that, as we have just seen, lone pair–bonding pair repulsions are greater than bonding pair–bonding pair repulsions. Therefore, the lone pair occupies the position that minimizes its interaction with the bonding pairs. If the lone pair were in an axial position, it would have three 90° interactions with bonding pairs. In an equatorial position, however, the lone pair has only two 90° interactions. Consequently, the lone pair occupies an equatorial position. The resulting molecular geometry is called **seesaw** because it resembles a seesaw (or teeter-totter).

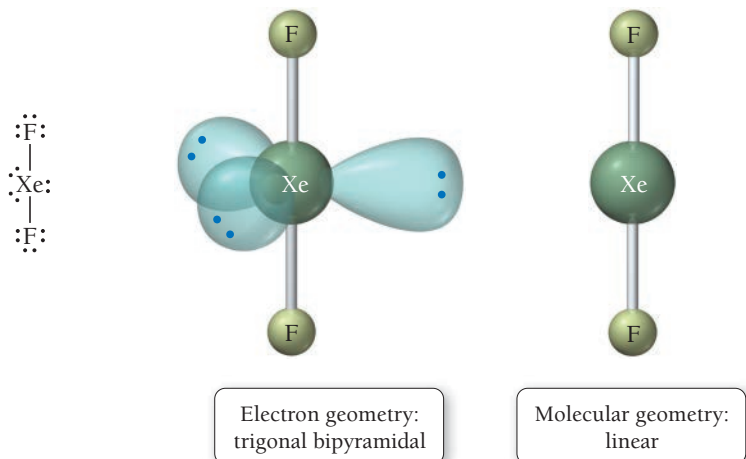
The seesaw molecular geometry is sometimes called an *irregular tetrahedron*.



When two of the five electron groups around the central atom are lone pairs, as in BrF_3 , the lone pairs occupy two of the three equatorial positions—again minimizing 90° interactions with bonding pairs and also avoiding a lone pair–lone pair 90° repulsion. The resulting molecular geometry is **T-shaped**.

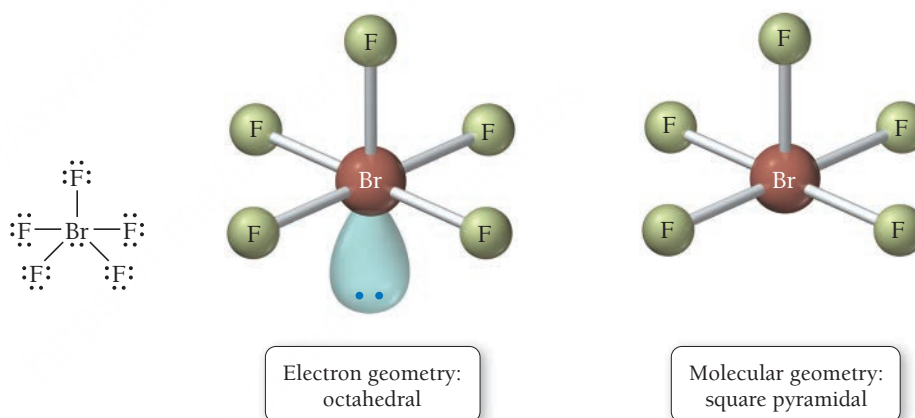


When three of the five electron groups around the central atom are lone pairs, as in XeF_2 , the lone pairs occupy all three of the equatorial positions and the resulting molecular geometry is linear.

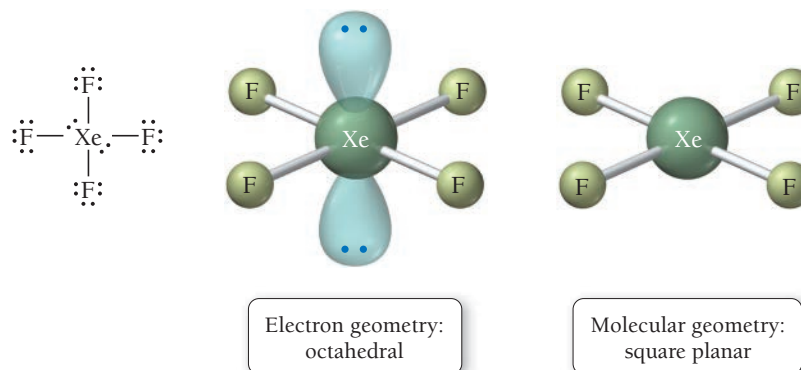


Six Electron Groups with Lone Pairs

The Lewis structure of BrF_5 is shown here. The central bromine atom has six electron groups (one lone pair and five bonding pairs). The electron geometry, due to the six electron groups, is octahedral. Since all six positions in the octahedral geometry are equivalent, the lone pair can be situated in any one of these positions. The resulting molecular geometry is **square pyramidal**.



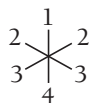
When two of the six electron groups around the central atom are lone pairs, as in XeF_4 , the lone pairs occupy positions across from one another (to minimize lone pair–lone pair repulsions). The resulting molecular geometry is **square planar**.



Lone Pair Electrons and Molecular Geometry

Suppose that a molecule with six electron groups were confined to two dimensions and therefore had a hexagonal planar electron geometry. If two of the six groups were lone pairs, where would they be located in the figure shown here?

- (a) positions 1 and 2
- (b) positions 1 and 3
- (c) positions 1 and 4



5.7

Cc

Conceptual
Connection

Summarizing VSEPR Theory:

- The geometry of a molecule is determined by the number of electron groups on the central atom (or on each interior atom, if there is more than one).
- The number of electron groups is determined from the Lewis structure of the molecule. If the Lewis structure contains resonance structures, we can use any one of the resonance structures to determine the number of electron groups.
- Each of the following counts as a single electron group: a lone pair, a single bond, a double bond, a triple bond, or a single electron.
- The geometry of the electron groups is determined by their repulsions as summarized in Table 5.5 on the next page. In general, electron group repulsions vary in relative ordering of repulsions as follows:

Lone pair — lone pair > Lone pair — bonding pair > Bonding pair — bonding pair

- Bond angles can vary from the idealized angles because double and triple bonds occupy more space than single bonds (they are bulkier even though they are shorter), and lone pairs occupy more space than bonding groups. The presence of lone pairs usually makes bond angles smaller than the ideal angle for the particular geometry.

Molecular Geometry and Electron Group Repulsions

Which statement is *always* true according to VSEPR theory?

- (a) The shape of a molecule is determined only by repulsions among bonding electron groups.
- (b) The shape of a molecule is determined only by repulsions among nonbonding electron groups.
- (c) The shape of a molecule is determined by the polarity of its bonds.
- (d) The shape of a molecule is determined by repulsions among all electron groups on the central atom (or interior atoms, if there is more than one).

5.8


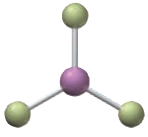
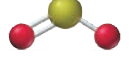
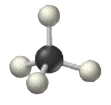
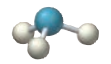
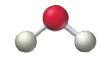
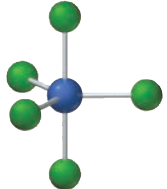
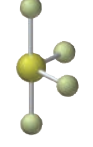
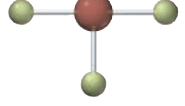

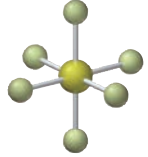
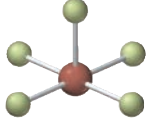
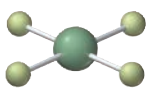
Cc

Conceptual
Connection

5.9 VSEPR Theory: Predicting Molecular Geometries

To determine the geometry of a molecule, we follow the procedure presented in Examples 5.10 and 5.11. The steps are in the left column, and two examples of applying the steps are in the center and right columns.

TABLE 5.5 Electron and Molecular Geometries

Electron Groups*	Bonding Groups	Lone Pairs	Electron Geometry	Molecular Geometry	Approximate Bond Angles	Example
2	2	0	Linear	Linear	180°	$\ddot{\text{O}}=\text{C}=\ddot{\text{O}}:$ 
3	3	0	Trigonal planar	Trigonal planar	120°	$\begin{array}{c} \text{:}\ddot{\text{F}}\text{:} \\ \text{:}\ddot{\text{F}}-\text{B}-\ddot{\text{F}}\text{:} \end{array}$ 
3	2	1	Trigonal planar	Bent	<120°	$\ddot{\text{O}}=\ddot{\text{S}}-\ddot{\text{O}}:$ 
4	4	0	Tetrahedral	Tetrahedral	109.5°	$\begin{array}{c} \text{H} \\ \\ \text{H}-\text{C}-\text{H} \\ \\ \text{H} \end{array}$ 
4	3	1	Tetrahedral	Trigonal pyramidal	<109.5°	$\begin{array}{c} \text{H} \\ \\ \text{H}-\ddot{\text{N}}-\text{H} \\ \\ \text{H} \end{array}$ 
4	2	2	Tetrahedral	Bent	<109.5°	$\text{H}-\ddot{\text{O}}-\text{H}$ 
5	5	0	Trigonal bipyramidal	Trigonal bipyramidal	120° (equatorial) 90° (axial)	$\begin{array}{c} \text{:}\ddot{\text{Cl}}\text{:} \\ \text{:}\ddot{\text{Cl}}\text{---}\text{P}\text{---}\ddot{\text{Cl}}\text{:} \\ \text{:}\ddot{\text{Cl}}\text{:} \end{array}$ 
5	4	1	Trigonal bipyramidal	Seesaw	<120° (equatorial) <90° (axial)	$\begin{array}{c} \text{:}\ddot{\text{F}}\text{:} \\ \text{:}\ddot{\text{F}}-\text{S}-\ddot{\text{F}}\text{:} \\ \text{:}\ddot{\text{F}}\text{:} \end{array}$ 
5	3	2	Trigonal bipyramidal	T-shaped	<90°	$\begin{array}{c} \text{:}\ddot{\text{F}}\text{:} \\ \text{:}\ddot{\text{F}}-\text{Br}-\ddot{\text{F}}\text{:} \\ \text{:}\ddot{\text{F}}\text{:} \end{array}$ 
5	2	3	Trigonal bipyramidal	Linear	180°	$\text{:}\ddot{\text{F}}-\ddot{\text{Xe}}-\ddot{\text{F}}\text{:}$ 
6	6	0	Octahedral	Octahedral	90°	$\begin{array}{c} \text{:}\ddot{\text{F}}\text{:} \\ \text{:}\ddot{\text{F}}-\text{S}-\ddot{\text{F}}\text{:} \\ \text{:}\ddot{\text{F}}\text{:} \end{array}$ 
6	5	1	Octahedral	Square pyramidal	<90°	$\begin{array}{c} \text{:}\ddot{\text{F}}\text{:} \\ \text{:}\ddot{\text{F}}-\text{Br}-\ddot{\text{F}}\text{:} \\ \text{:}\ddot{\text{F}}\text{:} \end{array}$ 
6	4	2	Octahedral	Square planar	90°	$\begin{array}{c} \text{:}\ddot{\text{F}}\text{:} \\ \text{:}\ddot{\text{F}}-\text{Xe}-\ddot{\text{F}}\text{:} \\ \text{:}\ddot{\text{F}}\text{:} \end{array}$ 

*Count only electron groups around the central atom. Each of the following is considered one electron group: a lone pair, a single bond, a double bond, a triple bond, or a single electron.

EXAMPLE 5.10

PROCEDURE FOR
Predicting Molecular
Geometries

1. Draw the Lewis structure for the molecule.

2. Determine the total number of electron groups around the central atom. Lone pairs, single bonds, double bonds, triple bonds, and single electrons each count as one group.

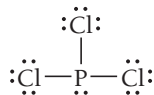
3. Determine the number of bonding groups and the number of lone pairs around the central atom. These should sum to your result from Step 2. Bonding groups include single bonds, double bonds, and triple bonds.

4. Refer to Table 5.5 to determine the electron geometry and molecular geometry. If no lone pairs are present around the central atom, the bond angles will be those of the ideal geometry. If lone pairs are present, the bond angles may be smaller than the ideal geometry.

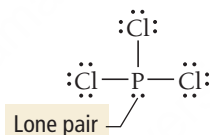
Predicting Molecular Geometries

Predict the geometry and bond angles of PCl_3 .

PCl_3 has 26 valence electrons.

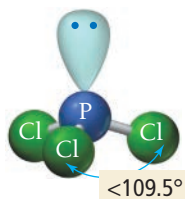


The central atom (P) has four electron groups.



Three of the four electron groups around P are bonding groups, and one is a lone pair.

The electron geometry is tetrahedral (four electron groups), and the molecular geometry—the shape of the molecule—is *trigonal pyramidal* (three bonding groups and one lone pair). Because of the presence of a lone pair, the bond angles are less than 109.5° .



Trigonal pyramidal

FOR PRACTICE 5.10

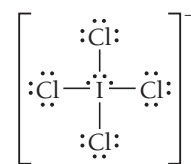
Predict the molecular geometry and bond angle of ClNO .

EXAMPLE 5.11

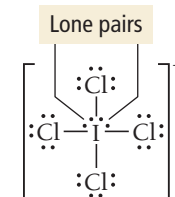
Predicting Molecular Geometries

Predict the geometry and bond angles of ICl_4^- .

ICl_4^- has 36 valence electrons.

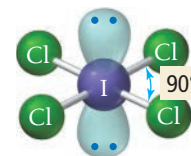


The central atom (I) has six electron groups.



Four of the six electron groups around I are bonding groups, and two are lone pairs.

The electron geometry is octahedral (six electron groups), and the molecular geometry—the shape of the molecule—is *square planar* (four bonding groups and two lone pairs). Even though lone pairs are present, the bond angles are 90° because the lone pairs are symmetrically arranged and do not compress the I—Cl bond angles.



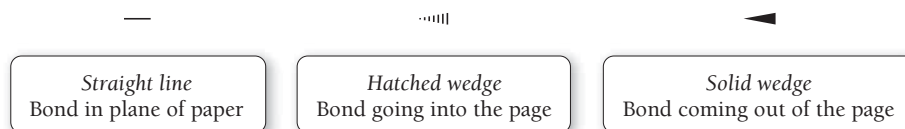
Square planar

FOR PRACTICE 5.11

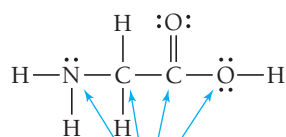
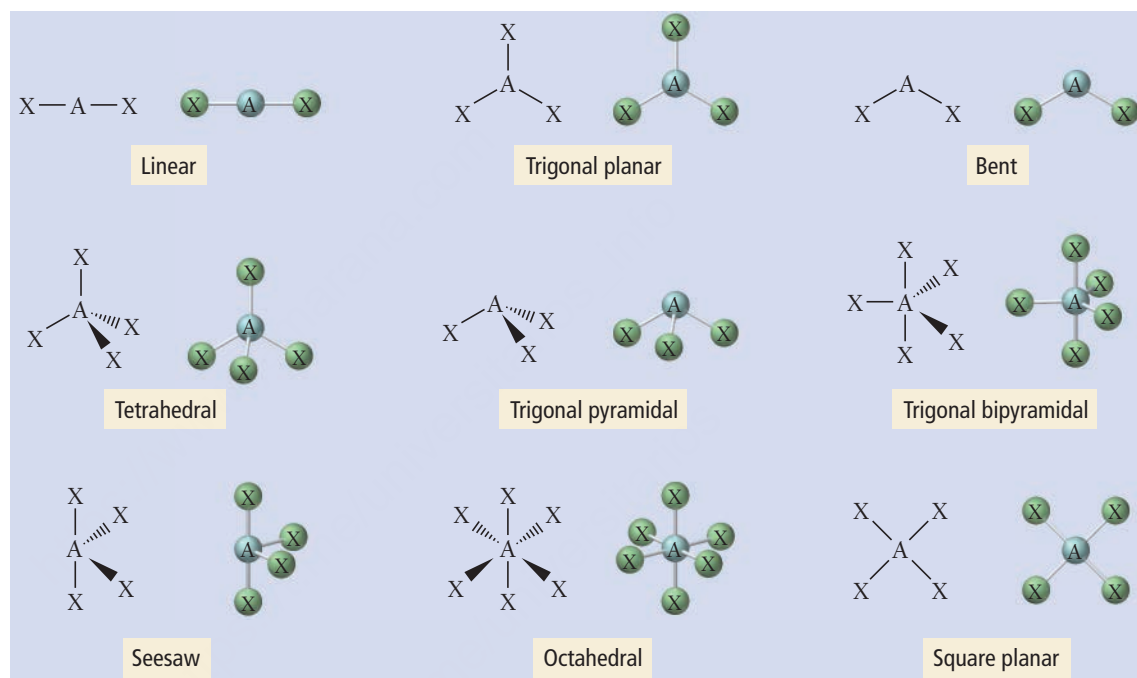
Predict the molecular geometry of I_3^- .

Representing Molecular Geometries on Paper

Since molecular geometries are three-dimensional, they are often difficult to represent on two-dimensional paper. Many chemists use the notation shown here for bonds to indicate three-dimensional structures on two-dimensional paper.

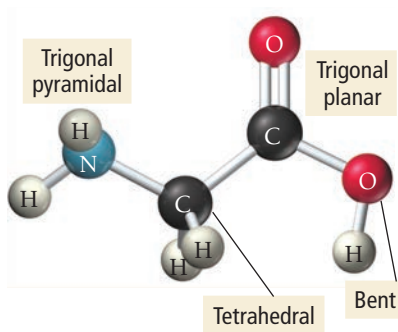


Some examples of the molecular geometries used in this book are shown here using this notation.



Four interior atoms

Glycine



Ball-and-Stick Model of Glycine

Predicting the Shapes of Larger Molecules

Larger molecules may have two or more *interior* atoms. When predicting the shapes of these molecules, we apply the principles we just covered to each interior atom. Consider glycine, an amino acid found in many proteins (such as those involved in opioid receptors discussed in Section 5.1). Glycine, shown at left, contains four interior atoms: one nitrogen atom, two carbon atoms, and an oxygen atom. To determine the shape of glycine, we determine the geometry about each interior atom as shown in the following table and accompanying ball-and-stick model shown at left.

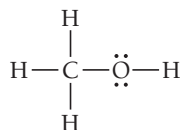
Atom (in Glycine)	Number of Electron Groups	Number of Lone Pairs	Molecular Geometry
Nitrogen	4	1	Trigonal pyramidal
Leftmost carbon	4	0	Tetrahedral
Rightmost carbon	3	0	Trigonal planar
Oxygen	4	2	Bent

EXAMPLE 5.12**Predicting the Shape of Larger Molecules**Interactive
Worked Example
Video 5.12PEARSON
eText
2.0

Predict the geometry about each interior atom in methanol (CH_3OH) and sketch the molecule.

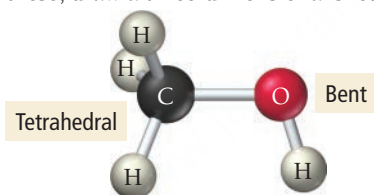
SOLUTION

Begin by drawing the Lewis structure of CH_3OH . CH_3OH contains two interior atoms: one carbon atom and one oxygen atom. To determine the shape of methanol, determine the geometry about each interior atom.

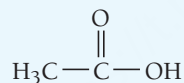


Atom	Number of Electron Groups	Number of Lone Pairs	Molecular Geometry
Carbon	4	0	Tetrahedral
Oxygen	4	2	Bent

Using the geometries of each of these, draw a three-dimensional sketch of the molecule as shown here.

**FOR PRACTICE 5.12**

Predict the geometry about each interior atom in acetic acid:



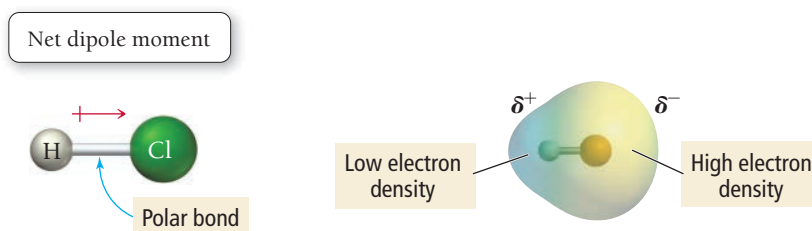
and sketch the molecule.

5.10 Molecular Shape and Polarity

In Section 5.2, we discussed polar bonds. Entire molecules can also be polar, depending on their shape and the nature of their bonds.

Polarity in Diatomic Molecules

If a diatomic molecule has a polar bond, the molecule as a whole is polar.



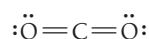
In the figure shown here, the image to the right is an electrostatic potential map of HCl . In these maps, yellow/red areas indicate electron-rich regions in the molecule and the blue areas indicate

electron-poor regions. Yellow indicates moderate electron density. Notice that the region around the more electronegative atom (chlorine) is more electron rich than the region around the hydrogen atom. Thus the molecule itself is polar. If the bond in a diatomic molecule is *nonpolar*, the molecule as a whole will be *nonpolar*.

Polarity in Polyatomic Molecules

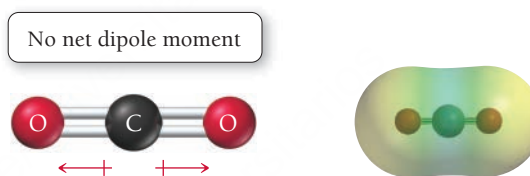
In polyatomic molecules, the presence of polar bonds may or may not result in a polar molecule, depending on the molecular geometry. If the molecular geometry is such that the dipole moments of individual polar bonds sum together to a net dipole moment, then the molecule is polar. But if the molecular geometry is such that the dipole moments of the individual polar bonds cancel each other (that is, sum to zero), then the molecule is nonpolar. It all depends on the geometry of the molecule.

Consider carbon dioxide:



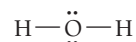
Each C=O bond in CO₂ is polar because oxygen and carbon have significantly different electronegativities (3.5 and 2.5, respectively). However, since CO₂ is a linear molecule, the polar bonds directly oppose one another and the dipole moment of one bond exactly opposes the dipole moment of the other. The two dipole moments sum to zero, and the *molecule* is nonpolar.

Dipole moments cancel each other because they are *vector quantities*; they have both a magnitude and a direction. Think of each polar bond as a vector, pointing in the direction of the more electronegative atom. The length of the vector is proportional to the electronegativity difference between the bonding atoms. In CO₂, we have two identical vectors pointing in exactly opposite directions—the vectors sum to zero, much as +1 and −1 sum to zero:

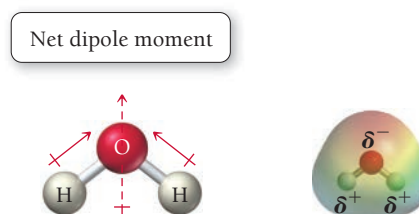


Notice that the electrostatic potential map of CO₂ shows regions of moderately high electron density (yellow with slight red) positioned symmetrically on either end of the molecule with a region of low electron density (blue) located in the middle.

In contrast, consider water:



The O—H bonds in water are also polar; oxygen and hydrogen have electronegativities of 3.5 and 2.1, respectively. However, the water molecule is not linear but bent. Therefore the two dipole moments do not sum to zero. If we imagine each bond as a vector pointing toward oxygen (the more electronegative atom), we see that, because of the angle between the vectors, they do not cancel, but sum to an overall vector or a net dipole moment (shown by the dashed arrow):



Water's electrostatic potential map shows an electron-rich region at the oxygen end of the molecule. Consequently, water is a polar molecule. Table 5.6 summarizes common geometries and molecular polarity.

See the next section, titled Vector Addition, for instructions about adding vectors.

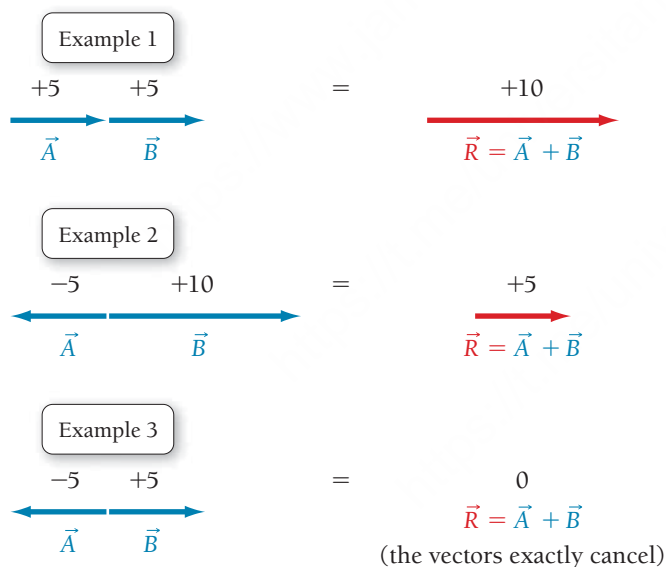
Summarizing Determining Molecular Shape and Polarity:

- Draw the Lewis structure for the molecule and determine its molecular geometry.
- Determine if the molecule contains polar bonds. A bond is polar if the two bonding atoms have sufficiently different electronegativities (see Figure 5.4). If the molecule contains polar bonds, superimpose a vector, pointing toward the more electronegative atom, on each bond. Make the length of the vector proportional to the electronegativity difference between the bonding atoms.
- Determine if the polar bonds add together to form a net dipole moment. Sum the vectors corresponding to the polar bonds together. If the vectors sum to zero, the molecule is nonpolar. If the vectors sum to a net vector, the molecule is polar.

Vector Addition

As discussed previously, we can determine whether a molecule is polar by summing the vectors associated with the dipole moments of all the polar bonds in the molecule. If the vectors sum to zero, the molecule will be nonpolar. If they sum to a net vector, the molecule will be polar. Here, we demonstrate how to add vectors together in one dimension and in two or more dimensions.

One Dimension To add two vectors that lie on the same line, assign one direction as positive. Vectors pointing in that direction have positive magnitudes. Vectors pointing in the opposite direction have negative magnitudes. Sum the vectors (always remembering to include their signs), as shown in Examples 1–3.



Two or More Dimensions To add two vectors, draw a parallelogram in which the two vectors form two adjacent sides. Draw the other two sides of the parallelogram parallel to and the same length as the two original vectors. Draw the resultant vector beginning at the origin and extending to the far corner of the parallelogram as shown in Examples 4 and 5.

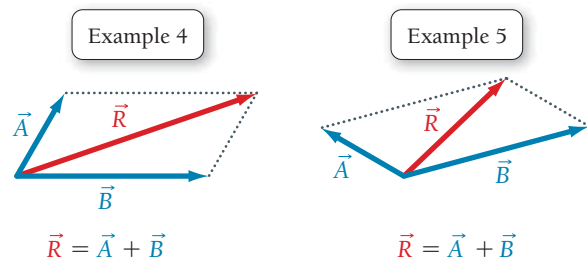
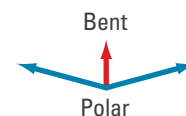


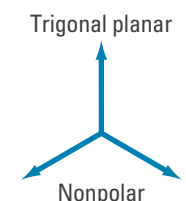
TABLE 5.6 Common Cases of Adding Dipole Moments to Determine whether a Molecule Is Polar



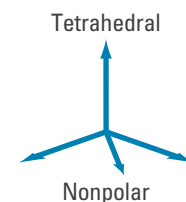
The dipole moments of two identical polar bonds pointing in opposite directions will cancel. The molecule is nonpolar.



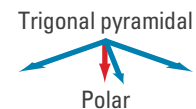
The dipole moments of two polar bonds with an angle of less than 180° between them will not cancel. The resulting dipole moment vector is shown in red. The molecule is polar.



The dipole moments of three identical polar bonds at 120° from each other will cancel. The molecule is nonpolar.



The dipole moments of four identical polar bonds in a tetrahedral arrangement (109.5° from each other) will cancel. The molecule is nonpolar.



The dipole moments of three polar bonds in a trigonal pyramidal arrangement (109.5° from each other) will not cancel. The resulting dipole moment vector is shown in red. The molecule is polar.

Note: In all cases in which the dipoles of two or more polar bonds cancel, the bonds are assumed to be identical. If one or more of the bonds are different from the other(s), the dipoles will not cancel and the molecule will be polar.

To add three or more vectors, add two of them together first, and then add the third vector to the result as shown in Examples 6 and 7.

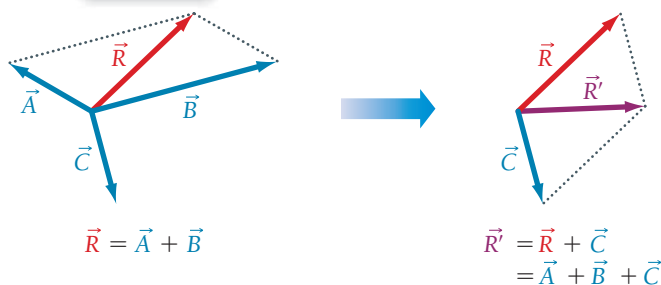


▲ Oil and water do not mix because water molecules are polar and the molecules that compose oil are nonpolar.

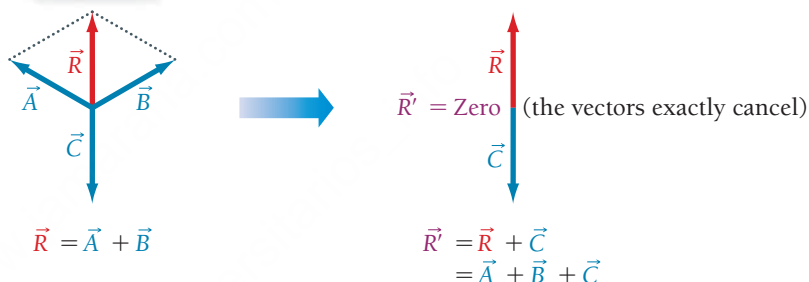


▲ A mixture of polar and nonpolar molecules is analogous to a mixture of magnetic marbles (opaque) and nonmagnetic marbles (transparent). As with the magnetic marbles, mutual attraction causes polar molecules to clump together, excluding the nonpolar molecules.

Example 6

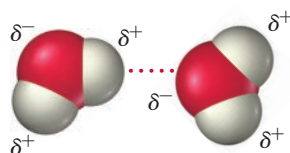


Example 7



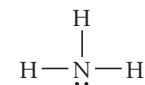
The ability to predict and examine a molecule's polarity is a key connection between the structure of a molecule and its properties, the theme of this book. Water and oil do not mix, for example, because water molecules are polar and the molecules that compose oil are generally nonpolar. Polar molecules interact strongly with other polar molecules because the positive end of one molecule is attracted to the negative end of another, just as the south pole of a magnet is attracted to the north pole of another magnet (**Figure 5.11 ▼**). A mixture of polar and nonpolar molecules is similar to a mixture of small magnetic particles and nonmagnetic ones. The magnetic particles (which are like polar molecules) clump together, excluding the nonmagnetic particles (which are like nonpolar molecules) and separating into distinct regions.

Opposite magnetic poles attract one another.



Opposite partial charges on molecules attract one another.

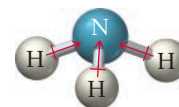
◀ **FIGURE 5.11 Interaction of Polar Molecules** The north pole of one magnet attracts the south pole of another magnet. In an analogous way, the positively charged end of one molecule attracts the negatively charged end of another (although the forces involved are different). As a result of this electrical attraction, polar molecules interact strongly with one another.

EXAMPLE 5.13**Determining If a Molecule Is Polar**Interactive
Worked Example
Video 5.13PEARSON
eText
2.0Determine if NH_3 is polar.**SOLUTION***Draw the Lewis structure for the molecule and determine its molecular geometry.*

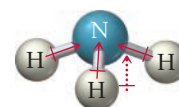
The Lewis structure has three bonding groups and one lone pair about the central atom. Therefore, the molecular geometry is trigonal pyramidal.

Determine if the molecule contains polar bonds. Sketch the molecule and superimpose a vector for each polar bond. Make the relative length of each vector proportional to the electronegativity difference between the atoms forming each bond. Point the vector in the direction of the more electronegative atom.

The electronegativities of nitrogen and hydrogen are 3.0 and 2.1, respectively. Therefore, the bonds are polar.

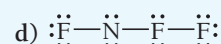
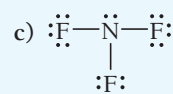
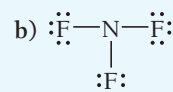
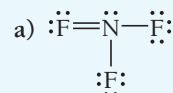
*Determine if the polar bonds add together to form a net dipole moment.* Examine the symmetry of the vectors (representing dipole moments) and determine if they cancel each other or sum to a net dipole moment.

The three dipole moments sum to a net dipole moment. The molecule is polar.

**FOR PRACTICE 5.13**Determine if CF_4 is polar.**SELF-ASSESSMENT****QUIZ**PEARSON
eText
2.0

- Which set of elements is arranged in order of increasing electronegativity?
 - $\text{O} < \text{S} < \text{As} < \text{Ge}$
 - $\text{Ge} < \text{As} < \text{S} < \text{O}$
 - $\text{S} < \text{O} < \text{As} < \text{Ge}$
 - $\text{As} < \text{O} < \text{Ge} < \text{S}$
- Which compound is likely to have an incomplete octet?
 - NH_3
 - SO_3
 - N_2O
 - BH_3
- Which pair of atoms forms the most polar bond?
 - N and O
 - C and O
 - C and F
 - N and F
- Which pair of atoms forms a nonpolar covalent bond?
 - C and S
 - C and O
 - B and O
 - Na and Cl

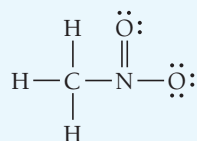
- Which is the correct Lewis structure for nitrogen trifluoride?



6. Choose the correct Lewis structure for CO_3^{2-} .

- a) $\left[\begin{array}{c} \text{:}\ddot{\text{O}}\text{:} \\ \parallel \\ \text{:}\ddot{\text{O}}=\text{C}=\ddot{\text{O}}\text{:} \end{array} \right]^{2-}$
- b) $\left[\begin{array}{c} \text{:}\ddot{\text{O}}\text{:} \\ \parallel \\ \text{:}\ddot{\text{O}}-\text{C}-\ddot{\text{O}}\text{:} \end{array} \right]^{2-} \longleftrightarrow \left[\begin{array}{c} \text{:}\ddot{\text{O}}\text{:} \\ \parallel \\ \text{:}\ddot{\text{O}}=\text{C}-\ddot{\text{O}}\text{:} \end{array} \right]^{2-} \longleftrightarrow \left[\begin{array}{c} \text{:}\ddot{\text{O}}\text{:} \\ \parallel \\ \text{:}\ddot{\text{O}}-\text{C}=\ddot{\text{O}}\text{:} \end{array} \right]^{2-}$
- c) $\left[\begin{array}{c} \text{:}\ddot{\text{O}}\text{:} \\ | \\ \text{:}\ddot{\text{O}}-\text{C}-\ddot{\text{O}}\text{:} \end{array} \right]^{2-}$
- d) $\left[\text{:}\ddot{\text{O}}-\ddot{\text{C}}=\ddot{\text{O}}-\ddot{\text{O}}\text{:} \right]^{2-}$

7. What is the formal charge of nitrogen in this structure?



- a) +1 b) +2 c) -1 d) -2

8. Which structure is the best resonance structure for the acetate ion shown here?

- $\left[\begin{array}{c} \text{H} \quad \text{:}\ddot{\text{O}}\text{:} \\ | \quad \parallel \\ \text{H}-\text{C}-\text{C}-\ddot{\text{O}}\text{:} \\ | \\ \text{H} \end{array} \right]^{-}$
- a) $\left[\begin{array}{c} \text{H} \\ | \\ \text{H}-\text{C}-\ddot{\text{C}}-\ddot{\text{O}}-\ddot{\text{O}}\text{:} \\ | \\ \text{H} \end{array} \right]^{-}$
- b) $\left[\begin{array}{c} \text{H} \quad \text{:}\ddot{\text{O}}\text{:} \\ | \quad \parallel \\ \text{H}-\text{C}=\text{C}-\ddot{\text{O}}\text{:} \\ | \\ \text{H} \end{array} \right]^{-}$
- c) $\left[\begin{array}{c} \text{:}\ddot{\text{O}}-\text{H} \\ | \\ \text{H}-\text{C}-\ddot{\text{C}}-\ddot{\text{O}}\text{:} \\ | \\ \text{H} \end{array} \right]^{-}$
- d) $\left[\begin{array}{c} \text{H} \quad \text{:}\ddot{\text{O}}\text{:} \\ | \quad \parallel \\ \text{H}-\text{C}-\text{C}=\ddot{\text{O}}\text{:} \\ | \\ \text{H} \end{array} \right]^{-}$

9. Use formal charge to choose the best Lewis structure for CH_3SOCH_3 .

- a) $\begin{array}{c} \text{H} \quad \text{:}\ddot{\text{O}}\text{:} \quad \text{H} \\ | \quad \parallel \quad | \\ \text{H}-\text{C}=\text{S}-\text{C}-\text{H} \\ | \quad \quad | \\ \text{H} \quad \quad \text{H} \end{array}$
- b) $\begin{array}{c} \text{H} \quad \text{:}\ddot{\text{O}}\text{:} \quad \text{H} \\ | \quad \parallel \quad | \\ \text{H}-\text{C}-\text{S}-\text{C}-\text{H} \\ | \quad \quad | \\ \text{H} \quad \quad \text{H} \end{array}$
- c) $\begin{array}{c} \text{H} \quad \text{:}\ddot{\text{O}}\text{:} \quad \text{H} \\ | \quad | \quad | \\ \text{H}-\text{C}-\text{S}-\text{C}-\text{H} \\ | \quad \quad | \\ \text{H} \quad \quad \text{H} \end{array}$
- d) $\begin{array}{c} \text{H} \quad \text{:}\ddot{\text{O}}\text{:} \quad \text{H} \\ | \quad \parallel \quad | \\ \text{H}-\text{C}=\text{S}-\text{C}-\text{H} \\ | \quad \quad | \\ \text{H} \quad \quad \text{H} \end{array}$

10. Determine the molecular geometry of CBr_4 .

- a) linear
b) trigonal planar
c) tetrahedral
d) trigonal pyramidal

11. Determine the molecular geometry of SeF_4 .

- a) tetrahedral
b) trigonal bipyramidal
c) T-shaped
d) seesaw

12. Predict the relative bond angles in BF_3 and SO_2 .

- a) BF_3 bond angles > SO_2 bond angle
b) SO_2 bond angle > BF_3 bond angles
c) BF_3 bond angles = SO_2 bond angle
d) Relative bond angles cannot be predicted

13. Predict the molecular geometry about N in the molecule CH_3NHCH_3 .

- a) linear
b) trigonal planar
c) trigonal pyramidal
d) bent

14. Which molecule is polar?

- a) SF_2
b) BH_3
c) PF_5
d) CS_2

Answers: 1. b; 2. d; 3. c; 4. a; 5. c; 6. b; 7. a; 8. d; 9. b; 10. c; 11. d; 12. a; 13. c; 14. a

CHAPTER SUMMARY

5

MasteringChemistry™ provides end-of-chapter exercises, feedback-enriched tutorial problems, animations, and interactive activities to encourage problem solving practice and deeper understanding of key concepts and topics.

REVIEW

KEY LEARNING OUTCOMES

CHAPTER OBJECTIVES	ASSESSMENT
Classify Bonds as Pure Covalent, Polar Covalent, or Ionic (5.2)	• Example 5.1 For Practice 5.1 Exercises 23, 24
Write Lewis Structures for Covalent Compounds (5.3)	• Examples 5.2, 5.3 For Practice 5.2, 5.3 Exercises 27–30
Write Lewis Structures for Polyatomic Ions (5.3)	• Example 5.4 For Practice 5.4 Exercises 31–34
Write Resonance Lewis Structures (5.4)	• Example 5.5 For Practice 5.5 Exercises 35, 36
Assign Formal Charges to Assess Competing Resonance Structures (5.4)	• Example 5.6 For Practice 5.6 For More Practice 5.6 Exercises 37–40
Draw Resonance Structures and Assign Formal Charge for Organic Compounds (5.4)	• Example 5.7 For Practice 5.7 Exercises 41–44
Write Lewis Structures for Compounds Having Expanded Octets (5.5)	• Example 5.8 For Practice 5.8 For More Practice 5.8 Exercises 47–50
Use VSEPR Theory to Predict the Basic Shapes of Molecules (5.7)	• Example 5.9 For Practice 5.9 Exercises 53, 54
Predict Molecular Geometries Using VSEPR Theory and the Effects of Lone Pairs (5.8)	• Examples 5.10, 5.11 For Practice 5.10, 5.11 Exercises 55–58
Predict the Shapes of Larger Molecules (5.8)	• Example 5.12 For Practice 5.12 Exercises 63, 64, 67, 68
Use Molecular Shape to Determine Polarity of a Molecule (5.10)	• Example 5.13 For Practice 5.13 Exercises 71–74

KEY TERMS

Section 5.2

polar covalent bond (206)
 electronegativity (207)
 dipole moment (μ) (208)
 percent ionic character (209)

Section 5.4

resonance structure (213)
 resonance hybrid (213)
 formal charge (215)

Section 5.5

free radical (218)

Section 5.6

bond energy (221)
 bond length (222)

Section 5.7

valence shell electron pair repulsion (VSEPR) theory (223)

electron groups (223)
 linear geometry (223)
 trigonal planar geometry (224)
 tetrahedral geometry (224)
 trigonal bipyramidal geometry (225)
 octahedral geometry (226)

Section 5.8

electron geometry (227)
 molecular geometry (227)

trigonal pyramidal geometry (227)
 bent geometry (228)
 seesaw geometry (229)
 T-shaped geometry (229)
 square pyramidal geometry (230)
 square planar geometry (230)

KEY CONCEPTS

Morphine: A Molecular Impostor (5.1)

- The properties of molecules are directly related to their shapes.
- Many biological functions, such as drug action and the immune response, are determined by the shapes of molecules.

Electronegativity and Bond Polarity (5.2)

- The shared electrons in a covalent bond are not always *equally* shared; when two dissimilar nonmetals form a covalent bond, the

electron density is greater on the more electronegative element. The result is a polar bond, with one element carrying a partial positive charge and the other a partial negative charge.

- Electronegativity—the ability of an atom to attract electrons to itself in chemical bonding—increases as we move across a period to the right in the periodic table and decreases as we move down a column.
- Elements with very dissimilar electronegativities form ionic bonds; those with very similar electronegativities form nonpolar

covalent bonds; and those with intermediate electronegativity differences form polar covalent bonds. The degree of polarity of a bond depends on the electronegativity difference between the bonding atoms.

Writing Lewis Structures of Molecular Compounds and Polyatomic Ions (5.3)

- Follow the procedure in Section 5.3 to draw Lewis structures for compounds.
- Electrons must be added (anions) or removed (cations) to account for the charge of a polyatomic ion.

Resonance and Formal Charge (5.4)

- Some molecules are best represented not by a single Lewis structure, but by two or more resonance structures. The actual structure of these molecules is a resonance hybrid: a combination or average of the contributing structures.
- The formal charge of an atom in a Lewis structure is the charge the atom would have if all bonding electrons were shared equally between bonding atoms.
- In general, the best Lewis structures will have the fewest atoms with formal charge, and any negative formal charge will be on the most electronegative atom.

Exceptions to the Octet Rule (5.5)

- Although the octet rule is normally used in drawing Lewis structures, some exceptions occur.
- These exceptions include odd-electron species, which necessarily have Lewis structures with only seven electrons around an atom. Such molecules, called free radicals, tend to be unstable and chemically reactive.
- Other exceptions to the octet rule include molecules with incomplete octets—usually just six electrons (especially important in compounds containing boron)—and molecules with expanded octets—usually 10 or 12 electrons (which can occur in compounds containing elements from the third row of the periodic table and below). Expanded octets never occur in second-period elements.

Bond Energies and Bond Lengths (5.6)

- The bond energy of a chemical bond is the energy required to break 1 mole of the bond in the gas phase. Average bond energies for a number of different bonds are tabulated.
- Average bond lengths are also tabulated. In general, triple bonds are shorter and stronger than double bonds, which are in turn shorter and stronger than single bonds.

VSEPR Theory: Predicting Molecular Shape (5.7–5.9)

- In VSEPR theory, molecular geometries are determined by the repulsions between electron groups on the central atom. An electron group can be a single bond, double bond, triple bond, lone pair, or even a single electron.
- The five basic molecular shapes are linear (two electron groups), trigonal planar (three electron groups), tetrahedral (four electron groups), trigonal bipyramidal (five electron groups), and octahedral (six electron groups).
- When lone pairs are present on the central atom, the *electron* geometry is still one of the five basic shapes, but one or more positions are occupied by lone pairs. The *molecular* geometry is therefore different from the electron geometry. Lone pairs are positioned so as to minimize repulsions with other lone pairs and with bonding pairs.
- To determine the geometry of a molecule, follow the procedure presented in Section 5.9.

Molecular Shape and Polarity (5.10)

- The polarity of a polyatomic molecule containing polar bonds depends on its geometry. If the dipole moments of the polar bonds are aligned in such a way that they cancel one another, the molecule will not be polar. If they are aligned in such a way as to sum together, the molecule will be polar.
- Highly symmetric molecules tend to be nonpolar, while asymmetric molecules containing polar bonds tend to be polar. The polarity of a molecule dramatically affects its properties.

KEY EQUATIONS AND RELATIONSHIPS

Dipole Moment (μ): Separation of Two Particles of Equal but Opposite Charges of Magnitude q by a Distance r (5.2)

$$\mu = qr$$

Percent Ionic Character (5.2)

percent ionic character =

$$\frac{\text{measured dipole moment of bond}}{\text{dipole moment if electron were completely transferred}} \times 100\%$$

Formal Charge (5.4)

formal charge = number of valence electrons –

(number of nonbonding electrons + $\frac{1}{2}$ number of shared electrons)

EXERCISES

REVIEW QUESTIONS

1. What is electronegativity? What are the periodic trends in electronegativity?
2. Explain the difference between a pure covalent bond, a polar covalent bond, and an ionic bond.
3. What is meant by the percent ionic character of a bond? Do any bonds have 100% ionic character?
4. What is a dipole moment?

- What is the magnitude of the dipole moment formed by separating a proton and an electron by 100 pm? 200 pm?
- What is the basic procedure for writing a covalent Lewis structure?
- How do you determine the number of electrons that go into the Lewis structure of a molecule? A polyatomic ion?
- What are resonance structures? What is a resonance hybrid?
- Do resonance structures always contribute equally to the overall structure of a molecule? Explain.
- What is formal charge? How is formal charge calculated? How is it helpful?
- Why does the octet rule have exceptions? Give the three major categories of exceptions and an example of each.
- Which elements can have expanded octets? Which elements cannot have expanded octets?
- What is bond energy?
- Give some examples of some typical bond lengths. Which factors influence bond lengths?
- Why is molecular geometry important? Cite some examples.
- According to VSEPR theory, what determines the geometry of a molecule?
- Name and draw the five basic electron geometries, and state the number of electron groups corresponding to each. What constitutes an *electron group*?
- Explain the difference between electron geometry and molecular geometry. Under what circumstances are they not the same?
- List the correct electron and molecular geometries that correspond to each set of electron groups around the central atom of a molecule.
 - four electron groups overall; three bonding groups and one lone pair
 - four electron groups overall; two bonding groups and two lone pairs
 - five electron groups overall; four bonding groups and one lone pair
 - five electron groups overall; three bonding groups and two lone pairs
 - five electron groups overall; two bonding groups and three lone pairs
 - six electron groups overall; five bonding groups and one lone pair
 - six electron groups overall; four bonding groups and two lone pairs
- How do you apply VSEPR theory to predict the shape of a molecule with more than one interior atom?
- How do you determine if a molecule is polar?
- Why is polarity a key connection between the structure of a molecule and its properties?

PROBLEMS BY TOPIC

Note: Answers to all odd-numbered Problems, numbered in blue, can be found in Appendix III. Exercises in the Problems by Topic section are paired, with each odd-numbered problem followed by a similar even-numbered problem. Exercises in the Cumulative Problems section are also paired but somewhat more loosely. Because of their nature, Challenge Problems and Conceptual Problems are unpaired.

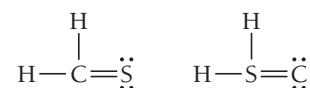
Electronegativity and Bond Polarity

- Determine if a bond between each pair of atoms would be pure covalent, polar covalent, or ionic.
 - Br and Br
 - C and Cl
 - C and S
 - Sr and O
- Determine if a bond between each pair of atoms would be pure covalent, polar covalent, or ionic.
 - C and N
 - N and S
 - K and F
 - N and N
- Draw the Lewis structure for CO with an arrow representing the dipole moment. Use Figure 5.5 to estimate the percent ionic character of the CO bond.
- Draw the Lewis structure for BrF with an arrow representing the dipole moment. Use Figure 5.5 to estimate the percent ionic character of the BrF bond.

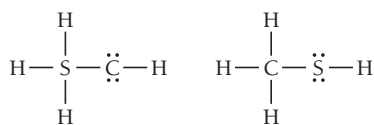
Writing Lewis Structures, Resonance, and Formal Charge

- Write the Lewis structure for each molecule.
 - PH₃
 - SCl₂
 - HI
 - CH₄
- Write the Lewis structure for each molecule.
 - NF₃
 - HBr
 - SBr₂
 - CCl₄

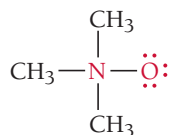
- Write the Lewis structure for each molecule.
 - SF₂
 - SiH₄
 - HCOOH (both O bonded to C)
 - CH₃SH (C and S central)
- Write the Lewis structure for each molecule.
 - CH₂O
 - C₂Cl₄
- Write the Lewis structure for each molecule or ion.
 - Cl₄
 - N₂O
 - SiH₄
 - Cl₂CO
- Write the Lewis structure for each molecule or ion.
 - H₃COH
 - OH⁻
 - BrO⁻
 - O₂²⁻
- Write the Lewis structure for each molecule or ion.
 - N₂H₂
 - N₂H₄
 - C₂H₂
 - C₂H₄
- Write the Lewis structure for each molecule or ion.
 - H₃COCH₃
 - CN⁻
 - NO₂⁻
 - ClO⁻
- Write a Lewis structure that obeys the octet rule for each molecule or ion. Include resonance structures if necessary and assign formal charges to each atom.
 - SeO₂
 - CO₃²⁻
 - ClO⁻
 - NO₂⁻
- Write a Lewis structure that obeys the octet rule for each ion. Include resonance structures if necessary and assign formal charges to each atom.
 - ClO₃⁻
 - ClO₄⁻
 - NO₃⁻
 - NH₄⁺
- Use formal charge to determine which Lewis structure is better.



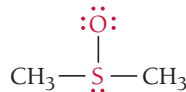
38. Use formal charge to determine which Lewis structure is better.



39. How important is this resonance structure to the overall structure of carbon dioxide? Explain.
- $$:\text{O} \equiv \text{C} - \text{O}:$$
40. In N_2O , nitrogen is the central atom and the oxygen atom is terminal. In OF_2 , however, oxygen is the central atom. Use formal charges to explain why.
41. Draw the Lewis structure (including resonance structures) for the acetate ion (CH_3COO^-). For each resonance structure, assign formal charges to all atoms that have formal charge.
42. Draw the Lewis structure (including resonance structures) for methyl azide (CH_3N_3). For each resonance structure, assign formal charges to all atoms that have formal charge.
43. Determine the formal charges of the atoms shown in red.



44. Determine the formal charges of the atoms shown in red.



Odd-Electron Species, Incomplete Octets, and Expanded Octets

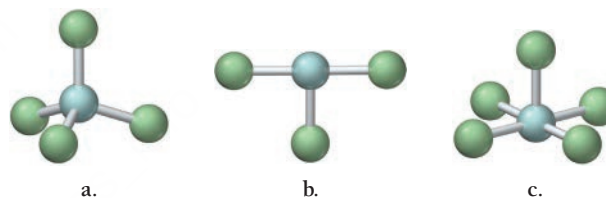
45. Write the Lewis structure for each molecule (octet rule not followed).
- a. BCl_3 b. NO_2 c. BH_3
46. Write the Lewis structure for each molecule (octet rule not followed).
- a. BBr_3 b. NO c. ClO_2
47. Write the Lewis structure for each ion. Include resonance structures if necessary and assign formal charges to all atoms. If necessary, expand the octet on the central atom to lower formal charge.
- a. PO_4^{3-} b. CN^- c. SO_3^{2-} d. ClO_2^-
48. Write Lewis structures for each molecule or ion. Include resonance structures if necessary and assign formal charges to all atoms. If you need to, expand the octet on the central atom to lower formal charge.
- a. SO_4^{2-} b. HSO_4^- c. SO_3 d. BrO_2^-
49. Write Lewis structures for each molecule or ion. Use expanded octets as necessary.
- a. PF_5 b. I_3^- c. SF_4 d. GeF_4
50. Write Lewis structures for each molecule or ion. Use expanded octets as necessary.
- a. ClF_5 b. AsF_6^- c. Cl_3PO d. IF_5

Bond Energies and Bond Lengths

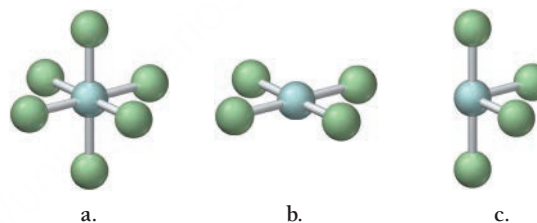
51. List these compounds in order of increasing carbon–carbon bond strength and in order of decreasing carbon–carbon bond length: HCCH , H_2CCH_2 , H_3CCH_3 .
52. Which of these compounds has the stronger nitrogen–nitrogen bond? The shorter nitrogen–nitrogen bond?
- H_2NNH_2 , HNNH

VSEPR Theory and Molecular Geometry

53. A molecule with the formula AB_3 has a trigonal pyramidal geometry. How many electron groups are on the central atom (A)?
54. A molecule with the formula AB_3 has a trigonal planar geometry. How many electron groups are on the central atom?
55. For each molecular geometry shown here, list the number of total electron groups, the number of bonding groups, and the number of lone pairs on the central atom.

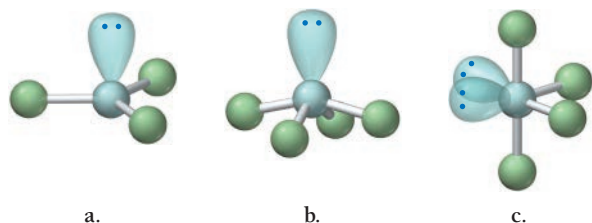


56. For each molecular geometry shown here, list the number of total electron groups, the number of bonding groups, and the number of lone pairs on the central atom.

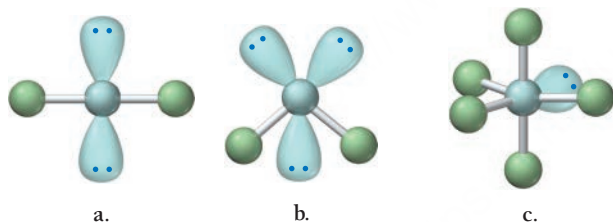


57. Determine the electron geometry, molecular geometry, and idealized bond angles for each molecule. In which cases do you expect deviations from the idealized bond angle?
- a. PF_3 b. SBr_2 c. CHCl_3 d. CS_2
58. Determine the electron geometry, molecular geometry, and idealized bond angles for each molecule. In which cases do you expect deviations from the idealized bond angle?
- a. CF_4 b. NF_3 c. OF_2 d. H_2S
59. Which species has the smaller bond angle, H_3O^+ or H_2O ? Explain.
60. Which species has the smaller bond angle, ClO_4^- or ClO_3^- ? Explain.
61. Determine the molecular geometry and draw each molecule or ion using the bond conventions shown in the “Representing Molecular Geometries on Paper” section of this chapter (see Section 5.9).
- a. SF_4 b. ClF_3 c. IF_2^- d. IBr_4^-
62. Determine the molecular geometry and draw each molecule or ion, using the bond conventions shown in the “Representing Molecular Geometries on Paper” section of this chapter (see Section 5.9).
- a. BrF_5 b. SCl_6 c. PF_5 d. IF_4^+

63. Determine the molecular geometry about each interior atom and draw each molecule. (Skeletal structure is indicated in parentheses.)
 a. C_2H_2 (HCCH) b. C_2H_4 (H_2CCH_2)
 c. C_2H_6 (H_3CCH_3)
64. Determine the molecular geometry about each interior atom and draw each molecule. (Skeletal structure is indicated in parentheses.)
 a. N_2 b. N_2H_2 (HNNH) c. N_2H_4 (H_2NNH_2)
65. Each ball-and-stick model incorrectly shows the electron and molecular geometry of a generic molecule. Explain what is wrong with each molecular geometry and provide the correct molecular geometry, given the number of lone pairs and bonding groups on the central atom.



66. Each ball-and-stick model incorrectly shows the electron and molecular geometry of a generic molecule. Explain what is wrong with each molecular geometry and provide the correct molecular geometry, given the number of lone pairs and bonding groups on the central atom.



Molecular Shape and Polarity

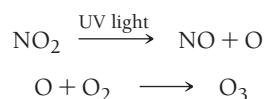
69. Explain why CO_2 and CCl_4 are both nonpolar, even though they contain polar bonds.
70. CH_3F is a polar molecule, even though the tetrahedral geometry often leads to nonpolar molecules. Explain.
71. Determine whether each molecule in Exercise 57 is polar or nonpolar.
72. Determine whether each molecule in Exercise 58 is polar or nonpolar.
73. Determine whether each molecule or ion is polar or nonpolar.
 a. ClO_3^-
 b. SCl_2
 c. SCl_4
 d. $BrCl_5$
74. Determine whether each molecule is polar or nonpolar.
 a. $SiCl_4$
 b. CF_2Cl_2
 c. SeF_6
 d. IF_5

CUMULATIVE PROBLEMS

75. Each compound contains both ionic and covalent bonds. Write ionic Lewis structures for each, including the covalent structure for the ion in brackets. Write resonance structures if necessary.
 a. $BaCO_3$ b. $Ca(OH)_2$ c. KNO_3 d. $LiIO$
76. Each compound contains both ionic and covalent bonds. Write ionic Lewis structures for each, including the covalent structure for the ion in brackets. Write resonance structures if necessary.
 a. $RbIO_2$ b. NH_4Cl c. KOH d. $Sr(CN)_2$
77. Carbon ring structures are common in organic chemistry. Draw a Lewis structure for each carbon ring structure, including any necessary resonance structures.
 a. C_4H_8 b. C_4H_4 c. C_6H_{12} d. C_6H_6
78. Amino acids are the building blocks of proteins. The simplest amino acid is glycine (H_2NCH_2COOH). Draw a Lewis structure for glycine. (Hint: The central atoms in the skeletal structure are nitrogen bonded to carbon, which is bonded to another carbon. The two oxygen atoms are bonded directly to the rightmost carbon atom.)
79. Formic acid is partly responsible for the sting of ant bites. By mass, formic acid is 26.10% C, 4.38% H, and 69.52% O. The molar mass of formic acid is 46.02 g/mol. Find the molecular formula of formic acid and draw its Lewis structure.
80. Diazomethane is a highly poisonous, explosive compound because it readily evolves N_2 . Diazomethane has the following composition by mass: 28.57% C; 4.80% H; and 66.64% N. The molar mass of diazomethane is 42.04 g/mol. Find the molecular formula of diazomethane, draw its Lewis structure, and assign formal charges to each atom. Why is diazomethane not very stable? Explain.
81. Draw the Lewis structure for nitric acid (the hydrogen atom is attached to one of the oxygen atoms). Include all three resonance structures by alternating the double bond among the three oxygen atoms. Use formal charge to determine which of the resonance structures is most important to the structure of nitric acid.
82. Phosgene (Cl_2CO) is a poisonous gas that was used as a chemical weapon during World War I. It is a potential agent for chemical

terrorism today. Draw the Lewis structure of phosgene. Include all three resonance forms by alternating the double bond among the three terminal atoms. Which resonance structure is the best?

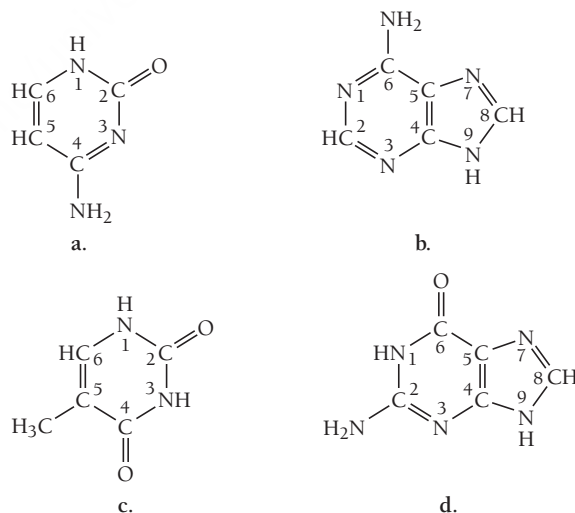
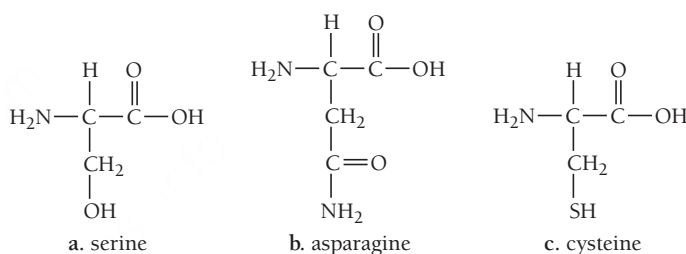
83. The cyanate ion (OCN^-) and the fulminate ion (CNO^-) share the same three atoms but have vastly different properties. The cyanate ion is stable, while the fulminate ion is unstable and forms explosive compounds. The resonance structures of the cyanate ion were explored in Example 5.6. Draw Lewis structures for the fulminate ion—including possible resonance forms—and use formal charge to explain why the fulminate ion is less stable (and therefore more reactive) than the cyanate ion.
84. Draw the Lewis structure for each organic compound from its condensed structural formula.
- C_3H_8
 - CH_3OCH_3
 - CH_3COCH_3
 - CH_3COOH
 - CH_3CHO
85. Draw the Lewis structure for each organic compound from its condensed structural formula.
- C_2H_4
 - CH_3NH_2
 - HCHO
 - $\text{CH}_3\text{CH}_2\text{OH}$
 - HCOOH
86. Use Lewis structures to explain why Br_3^- and I_3^- are stable, while F_3^- is not.
87. Draw the Lewis structure for HCSNH_2 . (The carbon and nitrogen atoms are bonded together, and the sulfur atom is bonded to the carbon atom.) Label each bond in the molecule as polar or nonpolar.
88. Draw the Lewis structure for urea, H_2NCONH_2 , one of the compounds responsible for the smell of urine. (The central carbon atom is bonded to both nitrogen atoms and to the oxygen atom.) Does urea contain polar bonds? Which bond in urea is most polar?
89. Some theories of aging suggest that free radicals cause certain diseases and perhaps aging in general. As you know from the Lewis model, such molecules are not chemically stable and will quickly react with other molecules. According to some theories, free radicals may attack molecules within the cell, such as DNA, changing them and causing cancer or other diseases. Free radicals may also attack molecules on the surfaces of cells, making them appear foreign to the body's immune system. The immune system then attacks the cells and destroys them, weakening the body. Draw Lewis structures for the free radicals implicated in this theory of aging, which are given here.
- O_2^-
 - O^-
 - OH
 - CH_3OO (unpaired electron on terminal oxygen)
90. Free radicals are important in many environmentally significant reactions. For example, photochemical smog—smog that results from the action of sunlight on air pollutants—forms in part by these two steps:



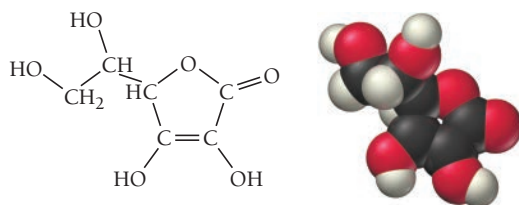
The product of this reaction, ozone, is a pollutant in the lower atmosphere. (Upper atmospheric ozone is a natural part of the

atmosphere that protects life on Earth from ultraviolet light.) Ozone is an eye and lung irritant and also accelerates the weathering of rubber products. Rewrite the above reactions using the Lewis structure of each reactant and product. Identify the free radicals.

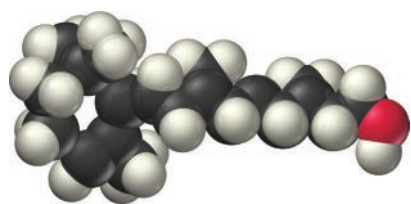
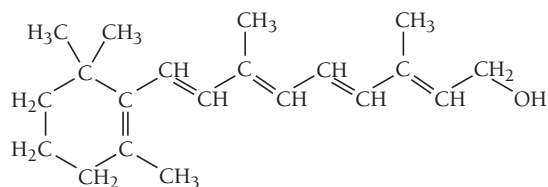
91. A compound composed of only carbon and hydrogen is 7.743% hydrogen by mass. Draw a Lewis structure for the compound.
92. A compound composed of only carbon and chlorine is 85.5% chlorine by mass. Draw a Lewis structure for the compound.
93. Amino acids are biological compounds that link together to form proteins, the workhorse molecules in living organisms. The skeletal structures of several simple amino acids are shown here. For each skeletal structure, complete the Lewis structure, determine the geometry about each interior atom, and draw the molecule, using the bond conventions of Section 5.9.
94. The genetic code is based on four different bases with the structures shown here. Assign a geometry to each interior atom in these four bases.



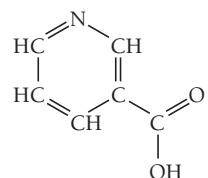
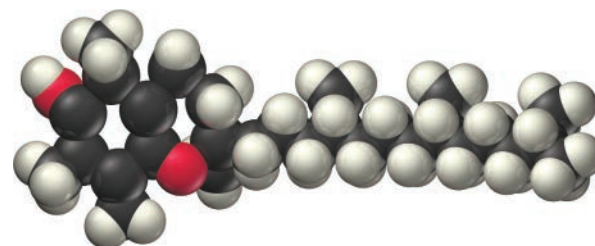
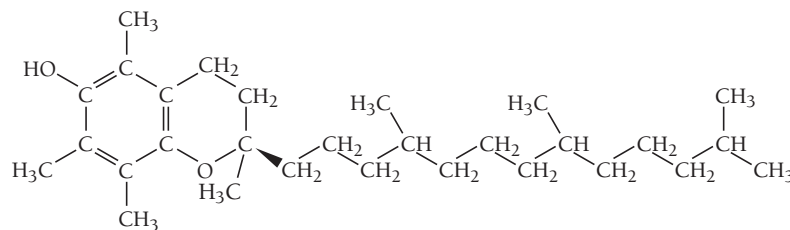
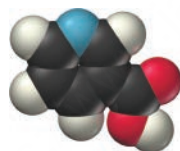
95. Most vitamins can be classified either as fat soluble, which results in their tendency to accumulate in the body (so that taking too much can be harmful), or water soluble, which results in their tendency to be quickly eliminated from the body in urine. Examine the structural formulas and space-filling models of these vitamins and determine whether each one is fat soluble (mostly nonpolar) or water soluble (mostly polar).



a. vitamin C

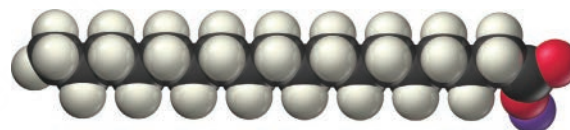
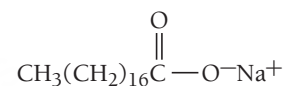


b. vitamin A

c. niacin (vitamin B₃)

d. vitamin E

96. Water alone does not easily remove grease from dishes or hands because grease is nonpolar and water is polar. The addition of soap to water, however, allows the grease to dissolve. Study the structure of sodium stearate (a soap) and describe how its structure allows it to interact with both nonpolar grease and polar water.



CHALLENGE PROBLEMS

97. The azide ion, N_3^- , is a symmetrical ion, and all of its contributing resonance structures have formal charges. Draw three important contributing structures for this ion.
98. A 0.167-g sample of an unknown compound contains 0.00278 mol of the compound. Elemental analysis of the compound gives the following percentages by mass: 40.00% C; 6.71% H; 53.29% O. Determine the molecular formula, molar mass, and Lewis structure of the unknown compound.
99. Use the dipole moments of HF and HCl (given at the end of the problem) together with the percent ionic character of each bond (Figure 5.5) to estimate the bond length in each molecule. How well does your estimated bond length agree with the bond length in Table 5.4?
- HCl $\mu = 1.08 \text{ D}$
HF $\mu = 1.82 \text{ D}$
100. One form of phosphorus exists as P_4 molecules. Each P_4 molecule has four equivalent P atoms, no double or triple bonds, and no expanded octets. Draw the Lewis structure for P_4 .
101. A compound has the formula C_8H_8 and does not contain any double or triple bonds. All the carbon atoms are chemically identical, as are all the hydrogen atoms. Draw the Lewis structure for this molecule.
102. Draw the Lewis structure for acetamide (CH_3CONH_2), an organic compound, and determine the geometry about each interior atom. Experiments show that the geometry about the nitrogen atom in acetamide is nearly planar. Which resonance structure can account for the planar geometry about the nitrogen atom?
103. Use VSEPR to predict the geometry (including bond angles) about each interior atom of methyl azide (CH_3N_3) and draw the molecule. Would you expect the bond angle between the two interior nitrogen atoms to be the same or different? Would you expect the two nitrogen–nitrogen bond lengths to be the same or different?

CONCEPTUAL PROBLEMS

104. In the very first chapter of this book, we described the scientific approach and put a special emphasis on scientific models or theories. In this chapter, we looked carefully at the Lewis model of chemical bonding. Why is this theory successful? What are some of the limitations of the theory?
105. Which statement best captures the fundamental idea behind VSEPR theory? Explain what is wrong with the statements you do not choose.
- The angle between two or more bonds is determined primarily by the repulsions between the electrons within those bonds and other (lone pair) electrons on the central atom of a molecule. Each of these electron groups (bonding electrons or lone pair electrons) lowers its potential energy by maximizing its separation from other electron groups, thus determining the geometry of the molecule.
 - The angle between two or more bonds is determined primarily by the repulsions between the electrons within those bonds. Each of these bonding electrons lowers its potential energy by maximizing its separation from other electron groups, thus determining the geometry of the molecule.
 - The geometry of a molecule is determined by the shapes of the overlapping orbitals that form the chemical bonds. Therefore, to determine the geometry of a molecule, you must determine the shapes of the orbitals involved in bonding.
106. Suppose that a molecule has four bonding groups and one lone pair on the central atom. Suppose further that the molecule is confined to two dimensions (this is a purely hypothetical assumption for the sake of understanding the principles behind VSEPR theory). Draw the molecule and estimate the bond angles.

QUESTIONS FOR GROUP WORK

Discuss these questions with the group and record your consensus answer.

107. Have each member of your group represent an atom of a metal or an atom of a nonmetal. Each group member holds a coin to represent an electron. Which group members are most reluctant to give up their electrons? Which group members are most willing to give up their electrons? Determine which kind of bond could form between each pair of group members. Tabulate your results.
108. Spend a few minutes reviewing the Lewis symbols for the atoms H through Ne. Form a circle and have each group member ask the group member on his or her right to draw the Lewis symbol for a specific atom. Keep going around until each group member can write all the Lewis dot symbols for the atoms H through Ne. Determine the formal charge for each symbol. In a complete sentence or two, describe why the formal charges are all the same.
109. Draw the Lewis symbols for the atoms Al and O. Use the Lewis model to determine the formula for the compound that forms from these two atoms.
110. Draft a list of step-by-step instructions for writing the correct Lewis structure for any molecule or polyatomic ion.
111. Pass a piece of paper around the group and ask each group member in turn to perform the next step in the process of determining a correct Lewis structure (including formal charges on all atoms and resonance structures, if appropriate) for the following molecules and ions: N_2H_4 , CCl_4 , CO_3^{2-} , and NH_4^+ .
112. In complete sentences, describe why someone might expect the bond angles in methane (CH_4) to be 90° , although the bonds are actually 109.5° .
113. At least two different numbers of electron groups can result in a linear molecule. What are they? What are the numbers of bonding groups and lone pairs in each case? Provide an example of a linear molecule in each case.
114. Have each member of your group select one of the molecules and complete steps a–d. Have members present their results to the rest of the group, explaining the reasoning they used to determine their answers.



- Draw the Lewis structure.
- Determine the molecular geometry and draw it accurately.
- Indicate the polarity of any polar bonds within the structure.
- Classify the molecule as polar or nonpolar.

Active Classroom Learning

DATA INTERPRETATION AND ANALYSIS

115. The VSEPR model is useful in predicting bond angles for many compounds. However, as we have seen, other factors (such as type of bond and atomic radii) may also influence bond angles. Consider that data for bond angles in related species in the tables and answer the questions.

Bond Angles in NO₂ and Associated Ions

Species	Bond Angle
NO ₂	134°
NO ₂ ⁺	180°
NO ₂ ⁻	115°

Bond Angles in PX₃ Compounds

Compounds	Bond Angle
PH ₃	94°
PF ₃	97°
PCl ₃	100°
PI ₃	102°

- Draw Lewis structures for all of the species in the Bond Angles in NO₂ and Associated Ions Table.
- Use the Lewis structures from part (a) to explain the observed bond angles in NO₂ and its associated ions.
- Draw Lewis structures for all of the species in the Bond Angles in PX₃ Compounds Table.
- Make your own table showing the atomic radii of H, F, Cl, and I.
- Use your answers to parts (c) and (d) to explain the observed bond angles in PH₃, PF₃, PCl₃, and PI₃.

ANSWERS TO CONCEPTUAL CONNECTIONS

Cc 5.1 N > P > Al > Na

Cc 5.2 (b) The dipole moment of the HCl bond is about 1 D, and the bond length is 127 pm. Previously you calculated the dipole moment for a 130-pm bond that is 100% ionic to be about 6.2 D. You can therefore estimate the bond's ionic character as $\frac{1}{6} \times 100\%$, which is closest to 15%.

Cc 5.3 (d) ClO because the sum of its valence electrons is odd.

Cc 5.4 (b) The only molecule in this group that could have an expanded octet is H₃PO₄ because phosphorus is a third-period element. Expanded octets *never* occur in second-period elements such as carbon and nitrogen.

Cc 5.5 The geometry of a molecule is determined by how the terminal atoms are arranged around the central atom, which

is in turn determined by how the electron groups are arranged around the central atom. The electron groups on the terminal atoms do not affect this arrangement.

Cc 5.6 (a) HCN has two electron groups (the single bond and the triple bond) resulting in a linear geometry.

Cc 5.7 (c) Positions 1 and 4 would put the greatest distance between the lone pairs and minimize lone pair–lone pair repulsions.

Cc 5.8 (d) All electron groups on the central atom (or interior atoms, if there is more than one) determine the shape of a molecule according to VSEPR theory.

6.1 Oxygen: A Magnetic Liquid 251

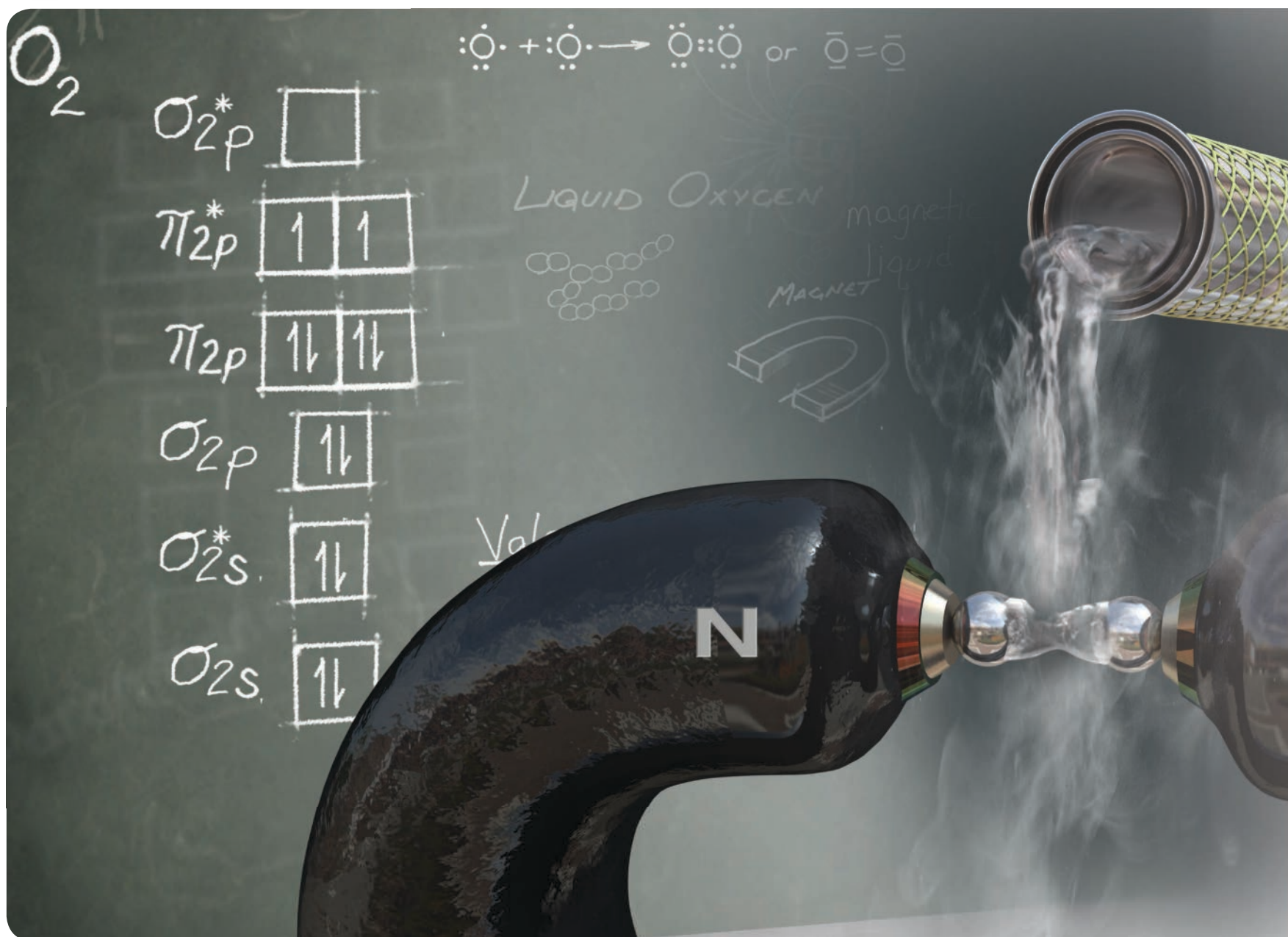
6.2 Valence Bond Theory: Orbital Overlap as a Chemical Bond 252

6.3 Valence Bond Theory: Hybridization of Atomic Orbitals 254

6.4 Molecular Orbital Theory: Electron Delocalization 266

6.5 Molecular Orbital Theory: Polyatomic Molecules 277

Key Learning Outcomes 279



Liquid oxygen is magnetic. This image shows how liquid oxygen can be suspended between the poles of a magnet.

CHAPTER

6

Chemical Bonding II

Valence Bond Theory and Molecular Orbital Theory

IN CHAPTER 5 WE EXAMINED a simple model for chemical bonding called the Lewis model. When we combine the Lewis model with valence shell electron pair repulsion (VSEPR), we can predict the shapes of molecules. In spite of the success of the Lewis model and VSEPR, however, we know that electrons do not act like dots. Instead, electrons exist within quantum-mechanical orbitals, as we discussed in Chapter 2. In this chapter, we examine two additional bonding theories—valence bond theory and molecular orbital theory—that treat electrons quantum mechanically. These theories are more sophisticated than the Lewis model and are also highly quantitative—they numerically predict quantities such as bond angles, bond strengths, and bond lengths. In other words, these theories make accurate predictions about the structure of molecules. As Linus Pauling points out in this chapter’s opening quote, understanding structure is central to understanding anything. In chemistry, that is especially true.

“It is structure that we look for whenever we try to understand anything. All science is built upon this search....”


—Linus Pauling (1901–1994)

6.1 Oxygen: A Magnetic Liquid

Do you remember the first time you played with a magnet? As a child, I was in awe of the invisible force that allowed my magnet to attract objects at a distance or even through other substances. I once had a pair of magnets so strong that they interacted with one another on opposite sides of my palm. A substance that is attracted to a magnet is *paramagnetic*—it contains unpaired electrons (see Section 3.7).

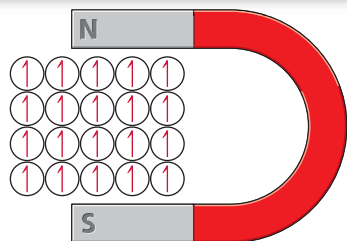
The spin of an unpaired electron generates a tiny magnetic field, just as the circular motion of electrical current running through a coil in an electromagnet generates a magnetic field. When a paramagnetic substance is brought near an external magnetic field, the orientation of the electrons’ spin (within the substance) aligns, resulting in a magnetic interaction between the substance and the magnet. This occurs, for example, when you bring a paper clip close to a magnet. The paper clip is attracted to the magnet by the interaction between the magnetic field of the magnet and the magnetic field generated by the spin of the now aligned unpaired electrons in the paper clip.

Paramagnetic




▲ A paramagnetic substance contains unpaired electrons. In the absence of an external magnetic field, the electrons are randomly oriented.

Paramagnetic substance in magnetic field



▲ When a paramagnetic substance is close to a magnetic field, its unpaired electrons orient, causing the substance to be attracted to the magnet.



KEY CONCEPT VIDEO
Valence Bond Theory

Valence bond theory is an application of a general quantum-mechanical approximation method called *perturbation theory*. In perturbation theory, a complex system (such as a molecule) is viewed as a simpler system (such as two atoms) that is slightly altered or perturbed by some additional force.

Most common liquids, such as water or gasoline, are not magnetic—they are not attracted to a magnet. But there is one liquid that is magnetic: liquid oxygen, which forms when we cool gaseous oxygen below $-183\text{ }^{\circ}\text{C}$ (see chapter-opening image). What causes liquid oxygen to be magnetic?

We already know that oxygen is a diatomic molecule with the following Lewis structure:



Notice that, in this structure, the electrons are all paired. Yet we know liquid oxygen is magnetic; *therefore, we know it must contain unpaired electrons*. The Lewis model for chemical bonding, while very useful, fails to predict the correct magnetic properties for oxygen. In this chapter, we explore more advanced theories for chemical bonding: valence bond theory and molecular orbital theory. We will see that molecular orbital theory—the most sophisticated and accurate bonding theory—correctly predicts the magnetic properties of oxygen. When we apply molecular orbital theory to the O_2 molecule, it shows that O_2 contains two unpaired electrons. These unpaired electrons are responsible for the magnetic behavior of oxygen. We will also examine bonding models that apply to metals and semiconductors in this chapter.

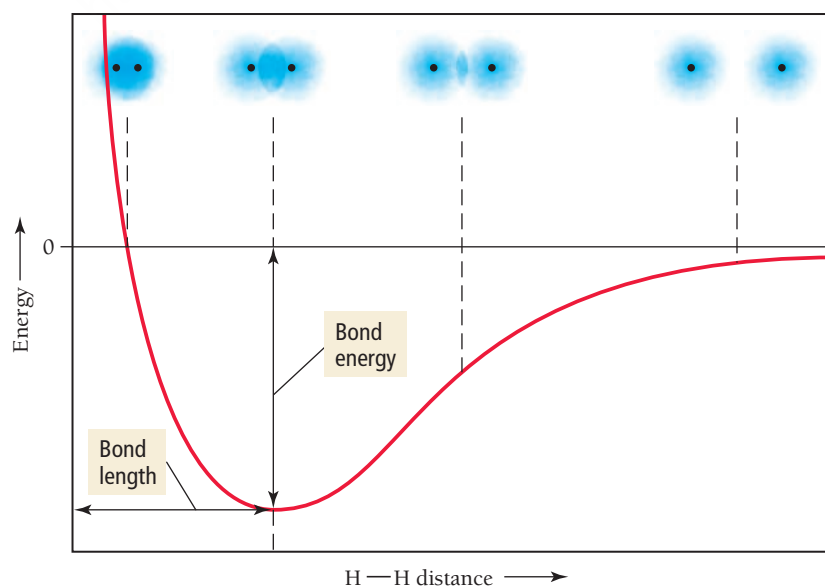
6.2 Valence Bond Theory: Orbital Overlap as a Chemical Bond

In the Lewis model, a chemical bond is a shared electron pair. In **valence bond theory**, a chemical bond is the overlap between two half-filled **atomic orbitals (AOs)**. Unlike the Lewis model, which represents valence electrons as dots, valence bond theory treats valence electrons as residing in quantum-mechanical atomic orbitals. In some cases, these orbitals are simply the standard s , p , d , and f atomic orbitals that we learned about in Chapter 2. In other cases, these orbitals are *hybridized atomic orbitals*, a kind of blend or combination of two or more standard atomic orbitals.

When two atoms approach each other, the electrons and nucleus of one atom interact with the electrons and nucleus of the other atom. In valence bond theory, we calculate the effect of these interactions on the energies of the valence electrons in the atomic orbitals. If the energy of the system is lowered because of the interactions, then a chemical bond forms. If the energy of the system is raised by the interactions, then a chemical bond does not form.

The interaction energy is usually calculated as a function of the distance between the nuclei of the two bonding atoms. **Figure 6.1** ▼ shows the calculated interaction energy between two hydrogen atoms as a function of the distance between their nuclei. The y-axis of the graph is the potential energy that results from the interactions between the charged particles in the two atoms. The x-axis is the separation (or internuclear distance) between the two atoms. As we can see from the graph, when the atoms are far apart (right side of the graph), the interaction energy is nearly zero because the two atoms do not interact to any significant extent. As the atoms get closer, the interaction energy becomes negative. This is a net stabilization that attracts

Interaction Energy of Two Hydrogen Atoms



► **FIGURE 6.1 Interaction Energy Diagram for H_2** The potential energy of two hydrogen atoms is lowest when they are separated by a distance that allows their $1s$ orbitals a substantial degree of overlap without too much repulsion between their nuclei. This distance, at which the system is most stable, is the bond length of the H_2 molecule.

one hydrogen atom to the other. If the atoms get too close, however, the interaction energy begins to rise, primarily because of the mutual repulsion of the two positively charged nuclei.

The most stable point on the curve occurs at the minimum of the interaction energy—this is the bond length. At this distance, the two atomic 1s orbitals have a significant amount of overlap, and the electrons spend time in the internuclear region where they interact with both nuclei. The value of the interaction energy at the equilibrium bond distance is the bond energy.

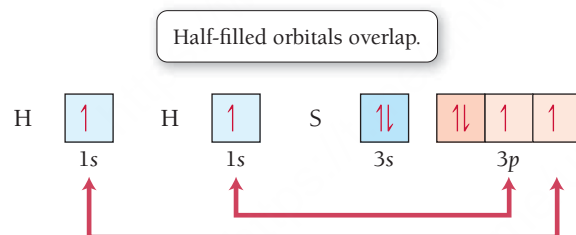
When we apply valence bond theory to calculate the interaction energies for a number of atoms and their corresponding molecules, we arrive at the following general observation: *The interaction energy is usually negative (or stabilizing) when the interacting atomic orbitals contain a total of two electrons that can spin-pair (orient with opposing spins).* Most commonly, the two electrons come from two half-filled orbitals, but in some cases, the two electrons come from one filled orbital overlapping with a completely empty orbital (this is called a coordinate covalent bond, and we will cover it in more detail in Chapter 22). In other words, when two atoms with half-filled orbitals approach each other, the half-filled orbitals *overlap*—parts of the orbitals occupy the same space—and the electrons occupying them align with opposite spins. This results in a net energy stabilization that constitutes a covalent chemical bond. The resulting geometry of the molecule emerges from the geometry of the overlapping orbitals.

When *completely filled* orbitals overlap, the interaction energy is positive (or destabilizing) and no bond forms.

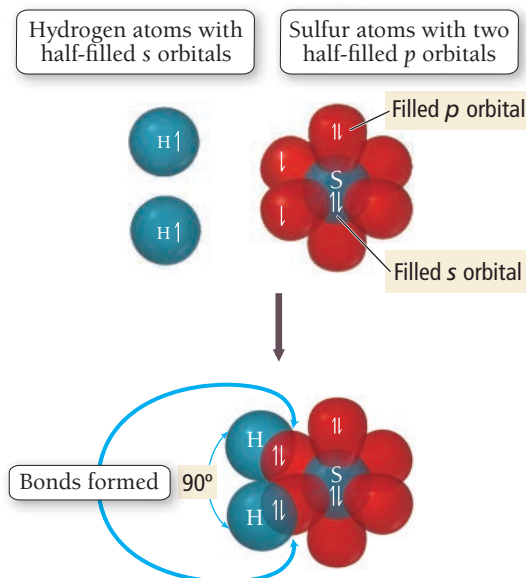
Summarizing Valence Bond Theory:

- The valence electrons of the atoms in a molecule reside in quantum-mechanical atomic orbitals. The orbitals can be the standard *s*, *p*, *d*, and *f* orbitals, or they may be hybrid combinations of these.
- A chemical bond results from the overlap of two half-filled orbitals and spin-pairing of the two valence electrons (or less commonly the overlap of a completely filled orbital with an empty orbital).
- The geometry of the overlapping orbitals determines the shape of the molecule.

We can apply the general concepts of valence bond theory to explain bonding in hydrogen sulfide, H_2S . The valence electron configurations of the atoms in the molecule are as follows:




The hydrogen atoms each have one half-filled orbital, and the sulfur atom has two half-filled orbitals. The half-filled orbitals on each hydrogen atom overlap with the two half-filled orbitals on the sulfur atom, forming two chemical bonds as illustrated in the following diagram:



To illustrate the spin-pairing of the electrons in the overlapping orbitals, we superimpose a half-arrow for each electron in each half-filled orbital and show that, within a bond, the electrons are spin-paired (one half-arrow is pointing up, and the other is pointing down). We also superimpose paired half-arrows in the filled sulfur s and p orbitals to represent the lone pair electrons in those orbitals. (Since those orbitals are full, they are not involved in bonding.)

A quantitative calculation of H_2S using valence bond theory yields bond energies, bond lengths, and bond angles. In the qualitative treatment here, we simply show how orbital overlap leads to bonding and make a rough sketch of the molecule based on the overlapping orbitals. Notice that, because the overlapping orbitals on the central atom (sulfur) are p orbitals and because p orbitals are oriented at 90° to one another, the predicted bond angle is 90° . The actual bond angle in H_2S is 92° . In the case of H_2S , a simple valence bond treatment matches well with the experimentally measured bond angle (in contrast to VSEPR theory, which predicts a bond angle of a bit less than 109.5°).



6.1 Cc

Conceptual
Connection

What Is a Chemical Bond? Part I

The answer to the question, *what is a chemical bond*, depends on the bonding model. Answer these three questions.

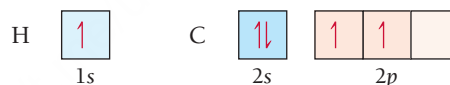
- What is a covalent chemical bond according to the Lewis model?
- What is a covalent chemical bond according to valence bond theory?
- Why are the answers to a and b different?



KEY CONCEPT VIDEO
**Valence Bond Theory:
Hybridization**

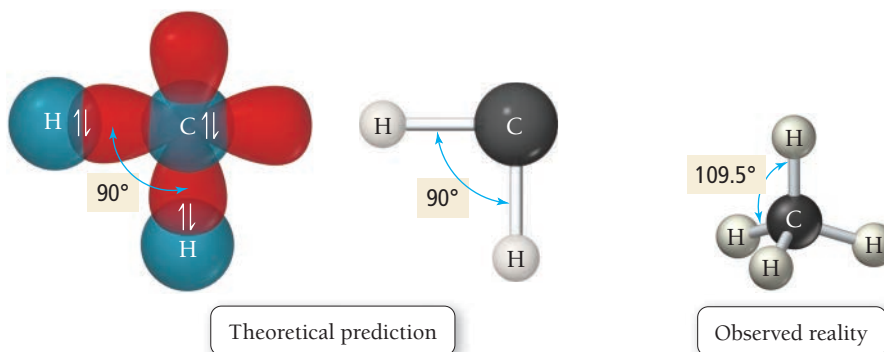
6.3 Valence Bond Theory: Hybridization of Atomic Orbitals

Although the overlap of half-filled *standard* atomic orbitals adequately explains the bonding in H_2S , it cannot adequately explain the bonding in many other molecules. For example, suppose we try to explain the bonding between hydrogen and carbon using the same approach. The valence electron configurations of H and C are shown here:



Carbon has only two half-filled orbitals and should therefore form only two bonds with two hydrogen atoms. We would predict that carbon and hydrogen would form a molecule with the formula CH_2 and with a bond angle of 90° (corresponding to the angle between any two p orbitals).

However, experiments show that the stable compound formed from carbon and hydrogen is CH_4 (methane), with bond angles of 109.5° . The experimental reality is different from our simple theoretical prediction in two ways. First, carbon forms bonds to four hydrogen atoms, not two. Second, the bond angles are much larger than the angle between two p orbitals.



Valence bond theory accounts for the bonding in CH_4 and many other polyatomic molecules by incorporating an additional concept called *orbital hybridization*. So far in the discussion in this chapter, we have assumed that the overlapping orbitals that form chemical bonds are simply the standard s , p , or d atomic orbitals, but this is an oversimplification. The concept of hybridization in valence bond theory is a step toward recognizing that *the orbitals in a molecule are not necessarily the same as the orbitals in an atom*. **Hybridization** is a mathematical procedure in which the standard atomic orbitals are combined to form new atomic orbitals called **hybrid orbitals** that correspond more closely to the actual distribution of electrons in chemically *bonded* atoms. Hybrid orbitals are still localized on individual atoms, but they have different shapes and energies from those of standard atomic orbitals.

Why does valence bond theory propose that electrons in some molecules occupy hybrid orbitals instead of the standard atomic orbitals? To answer this question, remember that, according to valence bond theory, a chemical bond is the overlap of two orbitals that together contain two electrons. The overlap of orbitals lowers the potential energy of the electrons in those orbitals. *The greater the overlap, the lower the energy and the stronger the bond*. Hybrid orbitals allow greater overlap because the electron density in a hybrid orbital is concentrated along a single directional lobe, as shown in **Figure 6.2** ▶. This concentration of electron density in a single direction allows for greater overlap between orbitals. In other words, hybrid orbitals *minimize* the energy of the molecule by *maximizing* the orbital overlap in a bond.

Hybridization, however, is not a free lunch—in most cases it actually costs some energy. So hybridization occurs only to the degree that the energy payback through bond formation is large. In general, therefore, the more bonds that an atom forms, the greater the tendency of its orbitals to hybridize. Central or interior atoms, which form the most bonds, have the greatest tendency to hybridize. Terminal atoms, which form the fewest bonds, have the least tendency to hybridize. *In this book, we focus on the hybridization of interior atoms and assume that all terminal atoms—those bonding to only one other atom—are unhybridized*. Hybridization is particularly important in carbon, which tends to form four bonds in its compounds and therefore always hybridizes.

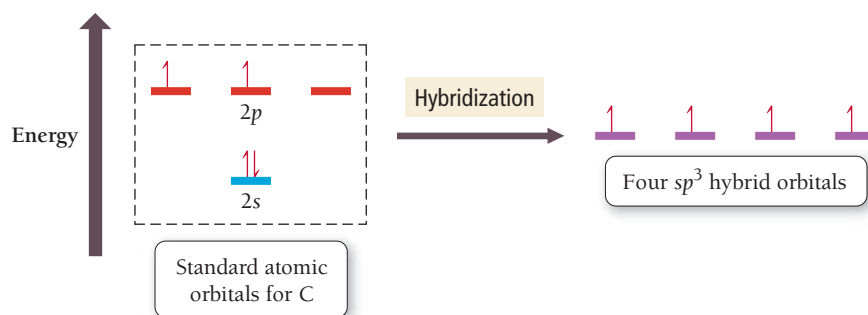
Although we cannot examine the procedure for obtaining hybrid orbitals in mathematical detail here, we can make the following general statements regarding hybridization:

- The *number of standard atomic orbitals* added together always equals the *number of hybrid orbitals* formed. The total number of orbitals is conserved.
- The *particular combinations* of standard atomic orbitals added together determine the *shapes and energies* of the hybrid orbitals formed.
- The *particular type of hybridization that occurs* is the one that yields the *lowest overall energy for the molecule*. Since actual energy calculations are beyond the scope of this book, we use electron geometries as determined by VSEPR theory to predict the type of hybridization.

We now turn to examining the different types of hybridization that commonly occur in molecules.


sp^3 Hybridization

We can account for the tetrahedral geometry in CH_4 by the hybridization of the one $2s$ orbital and the three $2p$ orbitals on the carbon atom. The four new orbitals that result, called sp^3 hybrids, are shown in the following energy diagram:




The notation sp^3 indicates that the hybrid orbitals are mixtures of one s orbital and three p orbitals. Notice that the hybrid orbitals all have the same energy—they are degenerate. The shapes of the sp^3 hybrid

Large lobe allows for greater overlap



Hybrid orbital

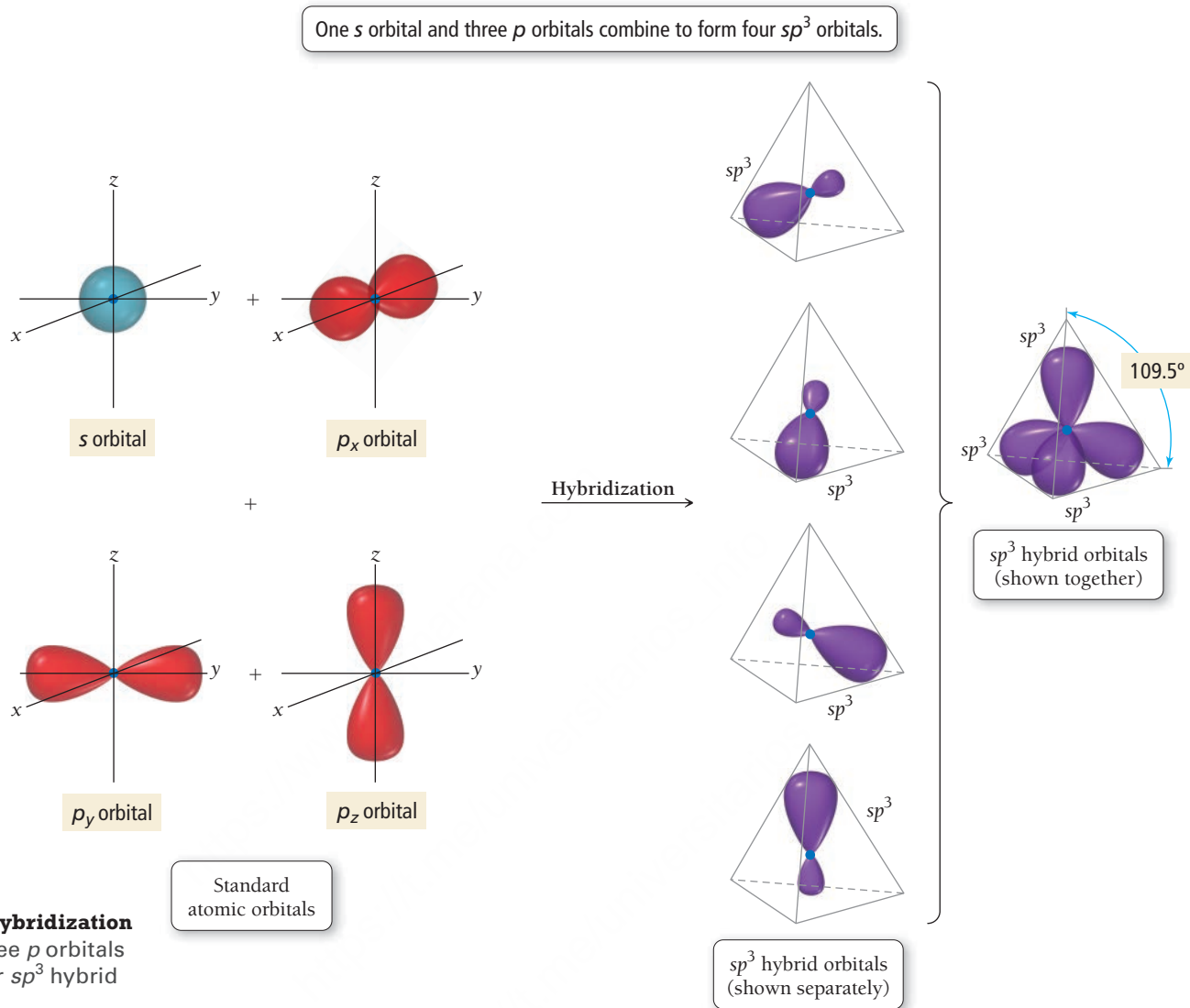


Standard p orbital

▲ **FIGURE 6.2 Comparison of Standard Atomic Orbital and Hybrid Orbital**

As we saw in Chapter 5, the word *hybrid* comes from breeding. A *hybrid* is an offspring of two animals or plants of different standard breeds. Similarly, a hybrid orbital is a product of mixing two or more standard atomic orbitals.

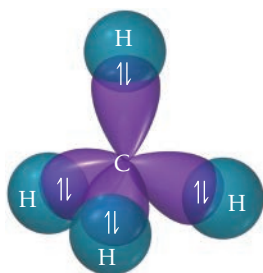
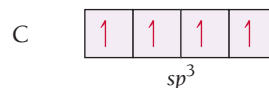
In a more nuanced treatment, hybridization is not an all-or-nothing process—it can occur to varying degrees that are not always easy to predict. We saw earlier, for example, that sulfur does not hybridize very much in forming H_2S .

Formation of sp^3 Hybrid Orbitals

► **FIGURE 6.3** sp^3 Hybridization
One s orbital and three p orbitals combine to form four sp^3 hybrid orbitals.

orbitals are shown in **Figure 6.3** ▲. The four hybrid orbitals are arranged in a tetrahedral geometry with 109.5° angles between them as we just discussed.

We can write an orbital diagram for carbon using these hybrid orbitals:



Carbon's four valence electrons occupy the orbitals singly with parallel spins as dictated by Hund's rule. With this electron configuration, carbon has four half-filled orbitals and can form four bonds with four hydrogen atoms.

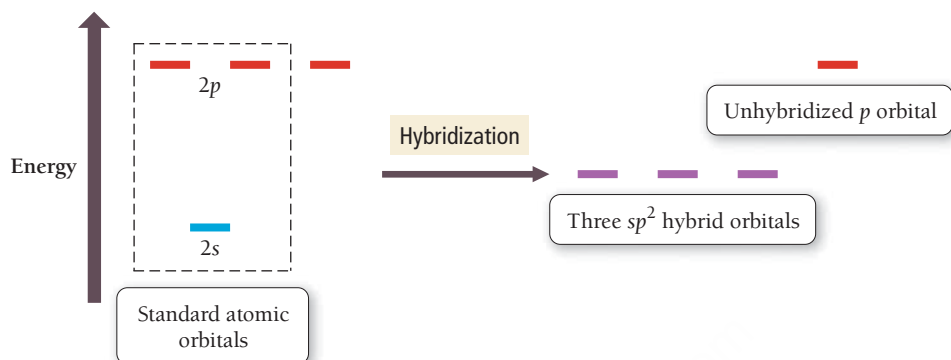
The geometry of the *overlapping orbitals* (the hybrids) is tetrahedral (see image in margin) with angles of 109.5° between the orbitals. The *resulting geometry of the molecule* is therefore tetrahedral, with 109.5° bond angles, in agreement with the experimentally measured geometry of CH_4 and with the predicted VSEPR geometry.

Hybridized orbitals readily form chemical bonds because they tend to maximize overlap with other orbitals. However, if the central atom of a molecule contains lone pairs, hybrid orbitals can also accommodate them. For example, the nitrogen orbitals in ammonia are sp^3 hybrids. Three of the hybrids are involved in bonding with three hydrogen atoms, but the fourth hybrid contains a lone pair. The presence

of the lone pair lowers the tendency of nitrogen's orbitals to hybridize. (Recall that the tendency to hybridize increases with the number of bonds formed.) Therefore, the bond angle in NH_3 is 107° , a bit closer to the unhybridized p orbital bond angle of 90° (see image in margin).

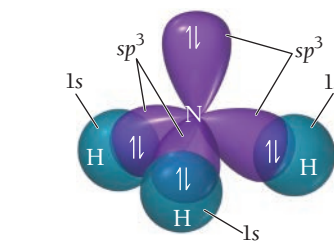
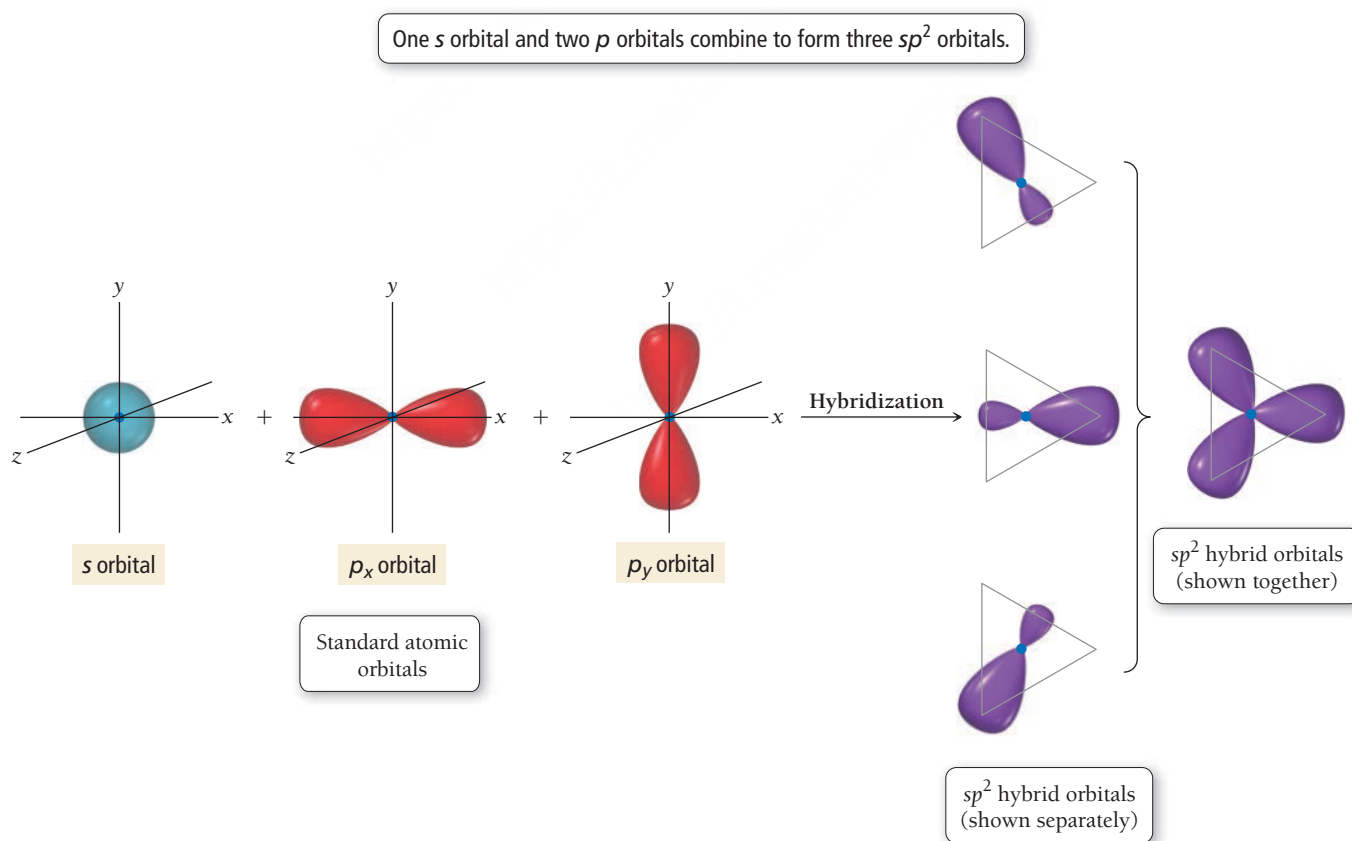
sp^2 Hybridization and Double Bonds

Hybridization of one s and two p orbitals results in three sp^2 hybrids and one leftover unhybridized p orbital, as shown in the following energy diagram:



The notation sp^2 indicates that the hybrids are mixtures of one s orbital and two p orbitals. The shapes of the sp^2 hybrid orbitals are shown in **Figure 6.4** ▼. Notice that the three hybrid orbitals have a trigonal planar geometry with 120° angles between them. The unhybridized p orbital, which is not shown in the figure, is oriented perpendicular to the three hybridized orbitals.

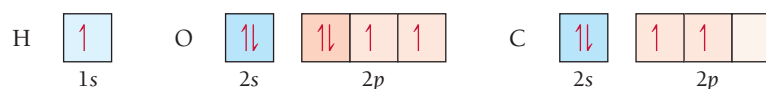
Formation of sp^2 Hybrid Orbitals



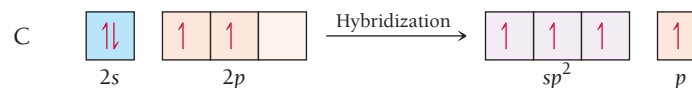
In valence bond theory, the particular hybridization scheme (sp^2 versus sp^3 , for example) for a given molecule is determined computationally, which is beyond our scope. In this book, we determine the particular hybridization scheme from the VSEPR geometry of the molecule, as shown later in this section.

▲ **FIGURE 6.4** sp^2 Hybridization One s orbital and two p orbitals combine to form three sp^2 hybrid orbitals. One p orbital (not shown) remains unhybridized. (The small lobes of the sp^2 hybridized orbitals have been omitted for clarity in the far right image that shows the three orbitals together.)

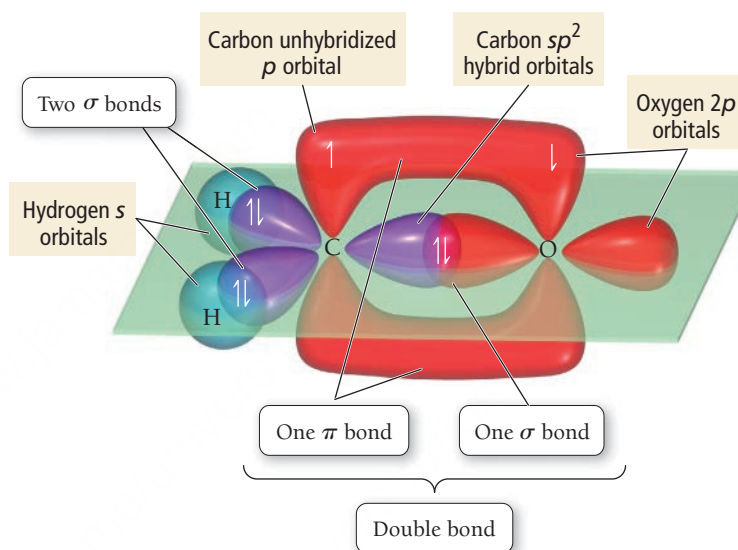
As an example of a molecule with sp^2 hybrid orbitals, consider H_2CO . The unhybridized valence electron configurations of each of the atoms are as follows:



Carbon is the central atom, and the hybridization of its orbitals is sp^2 :

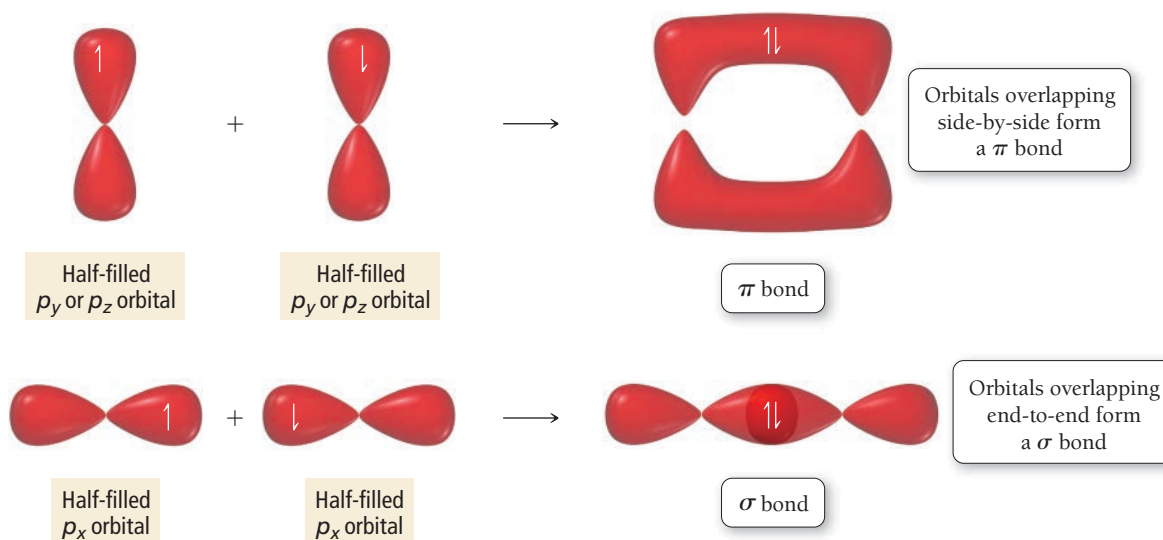


Note that each of the sp^2 orbitals is half-filled. The remaining electron occupies the leftover p orbital, even though it is slightly higher in energy. We can now see that the carbon atom has four half-filled orbitals and can therefore form four bonds: two with two hydrogen atoms and two (a double bond) with the oxygen atom. We draw the molecule and the overlapping orbitals as follows:

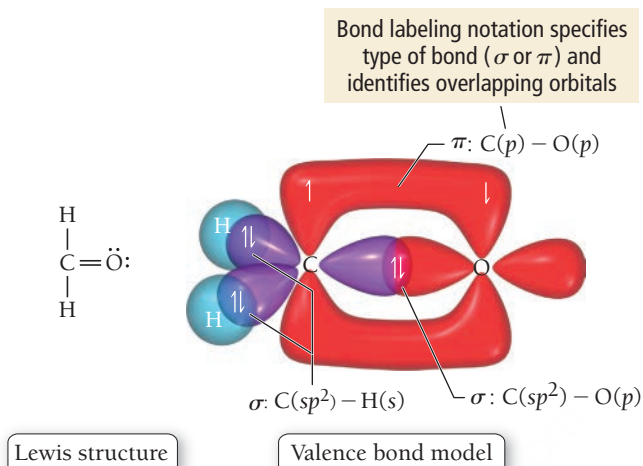


Notice the overlap between the half-filled p orbitals on the carbon and oxygen atoms. When p orbitals overlap this way (side by side), the resulting bond is a **pi (π) bond**, and the electron density is above and below the internuclear axis (the axis that connects the carbon atom and the oxygen atom). When orbitals overlap end to end, as in all the rest of the bonds in the molecule, the resulting bond is a **sigma (σ) bond** (**Figure 6.5 ▼**).

► **FIGURE 6.5 Sigma and Pi Bonding** When orbitals overlap side by side, the result is a pi (π) bond. When orbitals overlap end to end, they form a sigma (σ) bond. Two atoms can form only one sigma bond. A single bond is a sigma bond; a double bond consists of a sigma bond and a pi bond; a triple bond consists of a sigma bond and two pi bonds.



Even though we represent the two electrons in a π bond as two half arrows in the upper lobe, they are actually spread out over both the upper and lower lobes (this is one of the limitations we encounter when we try to represent electrons with arrows). We can label all the bonds in the molecule using a notation that specifies the type of bond (σ or π) as well as the type of overlapping orbitals. We have included this notation, as well as the Lewis structure of H_2CO for comparison, in the bonding diagram for H_2CO :



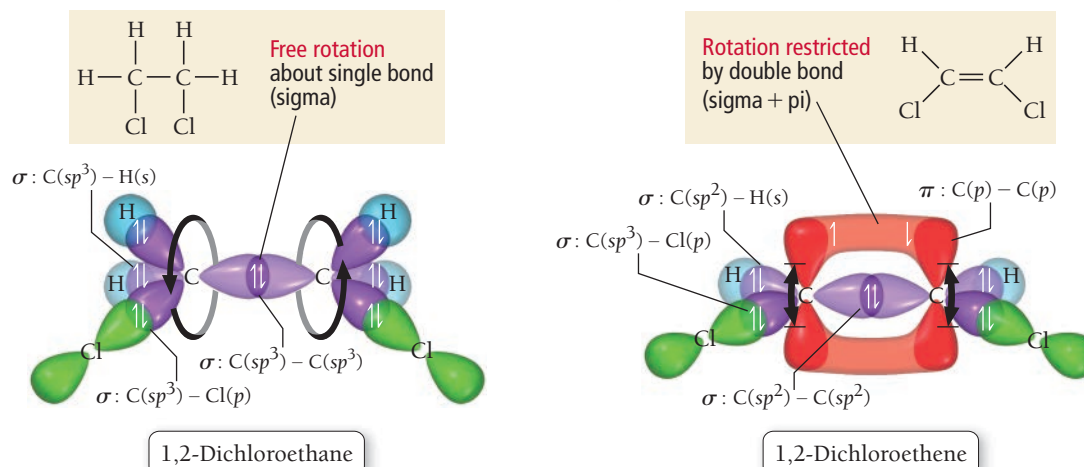
In these drawings of the orbitals of H_2CO , the nonbonding electrons have been omitted (for clarity).

Notice the correspondence between the valence bond model and the Lewis structure. In both cases, the central carbon atom forms four bonds: two single bonds and one double bond. However, valence bond theory gives us more insight into the bonds. The double bond between carbon and oxygen according to valence bond theory consists of two different kinds of bonds—one σ and one π —while in the Lewis model the two bonds within the double bond appear identical. *A double bond in the Lewis model always corresponds to one σ and one π bond in valence bond theory.* In general, π bonds are weaker than σ bonds because the side-to-side orbital overlap tends to be less efficient than the end-to-end orbital overlap. Consequently, the π bond in a double bond is generally easier to break than the σ bond.

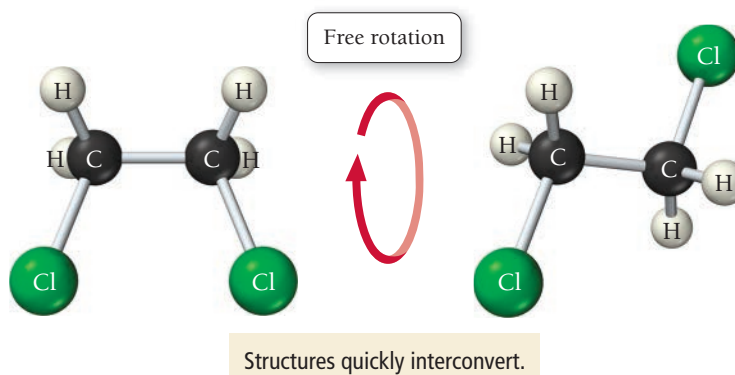
One—and only one— σ bond forms between any two atoms. Additional bonds must be π bonds.

Valence bond theory allows us to see why the rotation about a double bond is severely restricted. Because of the side-by-side overlap of the p orbitals, the π bond must essentially break for rotation to occur. Valence bond theory shows us the types of orbitals involved in the bonding and their shapes. In H_2CO , the sp^2 hybrid orbitals on the central atom are trigonal planar with 120° angles between them, so the resulting predicted geometry of the molecule is trigonal planar with 120° bond angles. The experimentally measured bond angles in H_2CO , as discussed previously (see Section 5.7), are 121.9° for the HCO bond and 116.2° for the HCH bond angle, close to the predicted values.

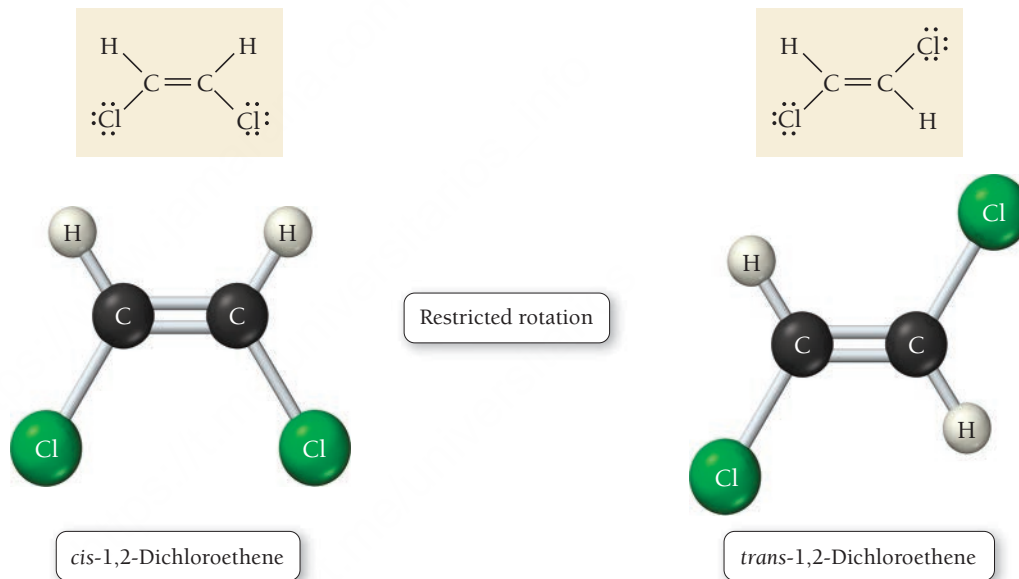
Although rotation about a double bond is highly restricted, rotation about a single bond is relatively unrestricted. Consider, for example, the structures of two chlorinated hydrocarbons, 1,2-dichloroethane and 1,2-dichloroethene:



The hybridization of the carbon atoms in 1,2-dichloroethane is sp^3 , resulting in relatively free rotation about the sigma single bond. Consequently, there is no difference between the following two structures at room temperature because they quickly interconvert:



In contrast, rotation about the double bond (sigma + pi) in 1,2-dichloroethene is restricted, so that, at room temperature, 1,2-dichloroethene exists in these two forms:



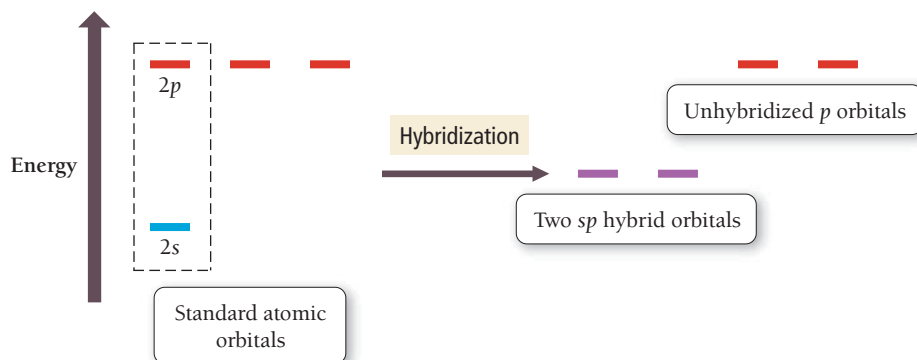
We distinguish between the two forms of 1,2-dichloroethene with the designations *cis* (meaning “same side”) and *trans* (meaning “opposite sides”). These two forms have different structures and therefore different properties. For example, the *cis* form boils at 60.3°C and the *trans* form boils at 47.2°C. Notice that *structure* (in this case the nature of a double bond and the arrangement of the chlorine atoms) *affects properties* (boiling point). Compounds such as the two forms of 1,2-dichloroethene, with the same molecular formula but different structures or different spatial arrangement of atoms, are called **isomers**. Nature can—and does—make different compounds out of the same atoms by arranging the atoms in different ways. Isomerism is common throughout chemistry and is especially important in organic chemistry, as we will discuss in Chapter 21.

Single and Double Bonds

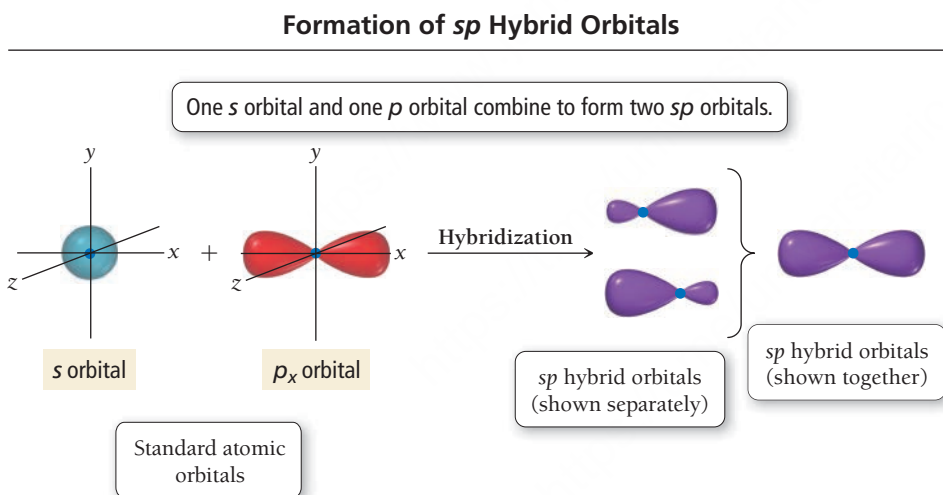
In Section 5.6, we learned that double bonds are stronger and shorter than single bonds. For example, a C—C single bond has an average bond energy of 347 kJ/mole, while a C=C double bond has an average bond energy of 611 kJ/mole. Use valence bond theory to explain why a double bond is *not* simply twice as strong as a single bond.

sp Hybridization and Triple Bonds

Hybridization of one *s* and one *p* orbital results in two *sp* hybrid orbitals and two leftover unhybridized *p* orbitals, as shown in the following energy diagram:



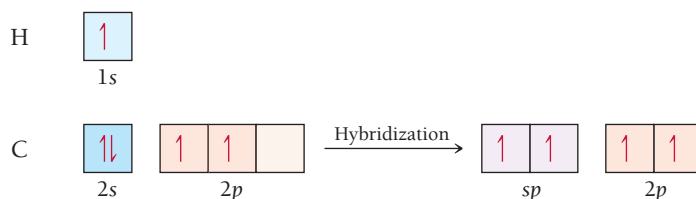
The shapes of the *sp* hybrid orbitals are shown in **Figure 6.6** ▼. Notice that the two *sp* hybrid orbitals are arranged in a linear geometry with a 180° angle between them. The unhybridized *p* orbitals, which are not shown in the figure, are oriented in the plane that is perpendicular to the hybridized *sp* orbitals.



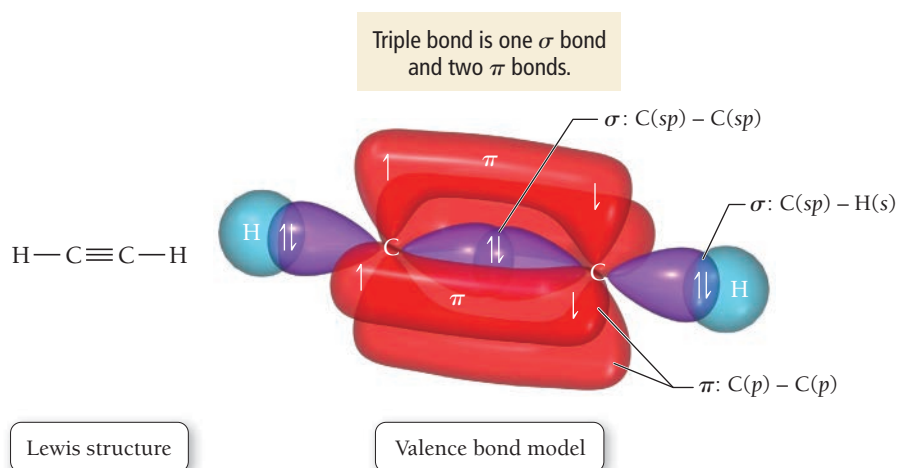
◀ **FIGURE 6.6** *sp* Hybridization

One *s* orbital and one *p* orbital combine to form two *sp* hybrid orbitals. Two *p* orbitals (not shown) remain unhybridized.

The acetylene molecule, $\text{HC}\equiv\text{CH}$, has *sp* hybrid orbitals. The four valence electrons of carbon can distribute themselves among the two *sp* hybrid orbitals and the two *p* orbitals:



Each carbon atom then has four half-filled orbitals and can form four bonds: one with a hydrogen atom and three (a triple bond) with the other carbon atom in $\text{HC}\equiv\text{CH}$. We draw the molecule and the overlapping orbitals as follows:

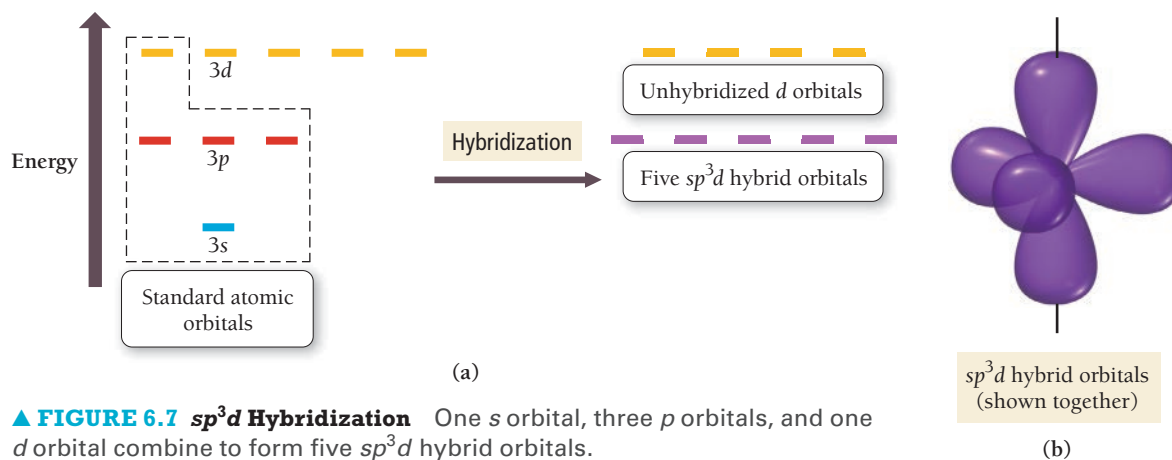
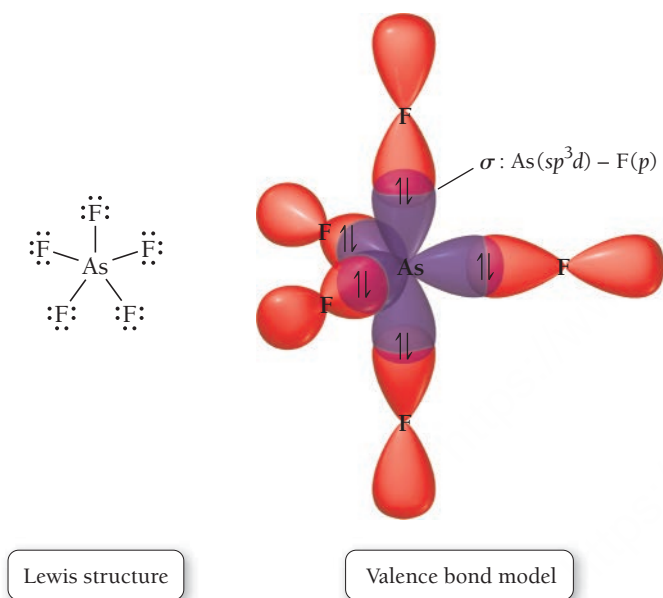


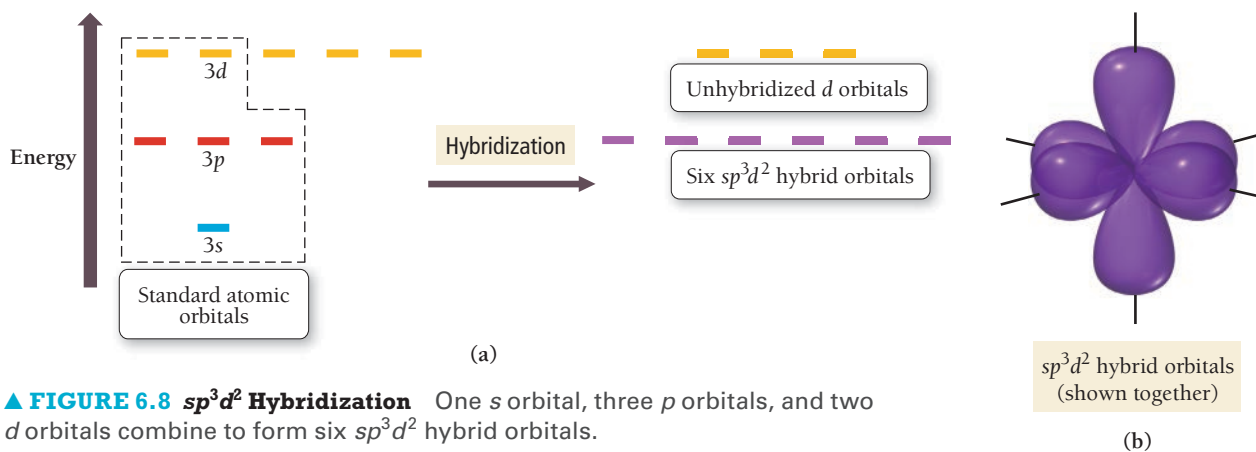
Notice that the triple bond between the two carbon atoms consists of two π bonds (overlapping p orbitals) and one σ bond (overlapping sp orbitals). The sp orbitals on the carbon atoms are linear with 180° between them, so the resulting geometry of the molecule is linear with 180° bond angles, in agreement with the experimentally measured geometry of $\text{HC}\equiv\text{CH}$ and with the prediction of VSEPR theory.

sp^3d and sp^3d^2 Hybridization

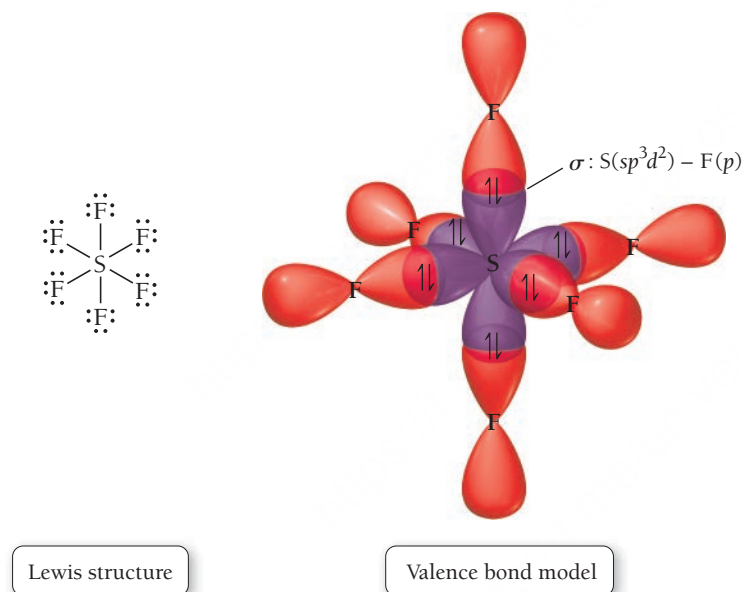
Recall that, according to the Lewis model, elements occurring in the third row of the periodic table (or below) can exhibit expanded octets (see Section 5.5). The equivalent concept in valence bond theory is hybridization involving the d orbitals. For third-period elements, the $3d$ orbitals are involved in hybridization because their energies are close to the energies of the $3s$ and $3p$ orbitals. The hybridization of one s orbital, three p orbitals, and one d orbital results in sp^3d hybrid orbitals, as shown in **Figure 6.7a** ▼. The five sp^3d hybrid orbitals have a trigonal bipyramidal arrangement, as shown in **Figure 6.7b** ▼. Arsenic pentafluoride, AsF_5 (shown in the margin), is an example of sp^3d hybridization. The arsenic atom bonds to five fluorine atoms by overlap between the sp^3d hybrid orbitals on arsenic and p orbitals on the fluorine atoms.

The sp^3d orbitals on the arsenic atom are trigonal bipyramidal, so the molecular geometry is trigonal bipyramidal.





The hybridization of one s orbital, three p orbitals, and two d orbitals results in sp^3d^2 hybrid orbitals, as shown in **Figure 6.8a** ▲. The six sp^3d^2 hybrid orbitals have an octahedral geometry, shown in **Figure 6.8b** ▲. Sulfur hexafluoride, SF_6 , is an example of sp^3d^2 hybridization. The sulfur atom bonds to six fluorine atoms by overlap between the sp^3d^2 hybrid orbitals on sulfur and p orbitals on the fluorine atoms.




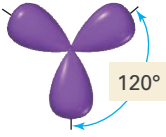

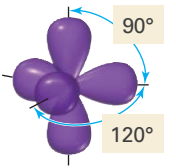
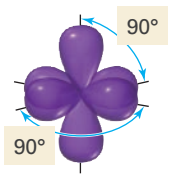
The sp^3d^2 orbitals on the sulfur atom are octahedral, so the molecular geometry is octahedral, again in agreement with VSEPR theory and with the experimentally observed geometry.

Writing Hybridization and Bonding Schemes

We have now studied examples of the five main types of atomic orbital hybridization. *But how do we know which hybridization scheme best describes the orbitals of a specific atom in a specific molecule?* In computational valence bond theory, the energy of the molecule is calculated using a computer; the degree of hybridization as well as the type of hybridization are varied to find the combination that gives the molecule the lowest overall energy. For our purposes, however, we can assign a hybridization scheme from the electron geometry—determined using VSEPR theory—of the central atom (or interior atoms) of the molecule.

The five VSEPR electron geometries and the corresponding hybridization schemes are shown in Table 6.1. For example, if the electron geometry of the central atom is tetrahedral, then the hybridization is sp^3 , and if the electron geometry is octahedral, then the hybridization is sp^3d^2 , and so on. Although this method of determining the hybridization scheme is not 100% accurate (for example, it predicts that H_2S should be sp^3 when in fact H_2S is largely unhybridized), it is the best we can do without more complex computer-based calculations.

TABLE 6.1 Hybridization Scheme from Electron Geometry

Number of Electron Groups	Electron Geometry (from VSEPR Theory)	Hybridization Scheme	Orbital Shapes and Relative Orientation
2	Linear	sp	
3	Trigonal planar	sp^2	
4	Tetrahedral	sp^3	
5	Trigonal bipyramidal	sp^3d	
6	Octahedral	sp^3d^2	

*As defined in the previous chapter, an *electron group* is a lone pair, bonding pair, or multiple bond.



6.3 Cc

Hybridization

Conceptual
Connection

What is the hybridization of C in CO_2 ?

- (a) sp (b) sp^2 (c) sp^3

We are now ready to put the Lewis model and valence bond theory together to describe bonding in molecules. In the procedure and examples that follow, we demonstrate how to write a *hybridization and bonding scheme* for a molecule. This involves drawing the Lewis structure for the molecule, determining its geometry using VSEPR theory, determining the hybridization of the interior atoms, drawing the molecule with its overlapping orbitals, and labeling each bond with the σ and π notation followed by the type of overlapping orbitals. This procedure involves virtually everything we have covered about bonding so far in this chapter and Chapter 5. The procedure for writing a hybridization and bonding scheme is shown in the left column, with two examples of how to apply the procedure in the columns to the right.

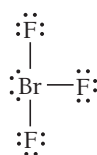
EXAMPLE 6.1**PROCEDURE FOR Hybridization and Bonding Scheme****Hybridization and Bonding Scheme**

Write a hybridization and bonding scheme for bromine trifluoride, BrF_3 .

1. Draw the Lewis structure for the molecule.

SOLUTION

BrF_3 has 28 valence electrons and the following Lewis structure:



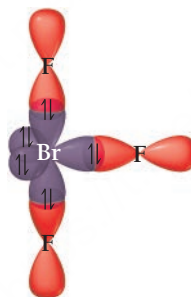
2. Apply VSEPR theory to predict the electron geometry about the central atom (or interior atoms).

The bromine atom has five electron groups and therefore has a trigonal bipyramidal electron geometry.

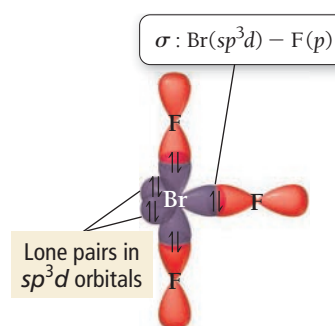
3. Select the correct hybridization for the central atom (or interior atoms) based on the electron geometry (refer to Table 6.1).

A trigonal bipyramidal electron geometry corresponds to sp^3d hybridization.

4. Sketch the molecule, beginning with the central atom and its orbitals. Show overlap with the appropriate orbitals on the terminal atoms.



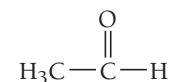
5. Label all bonds using the σ or π notation followed by the type of overlapping orbitals.

**FOR PRACTICE 6.1**

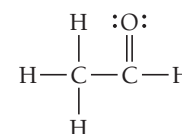
Write a hybridization and bonding scheme for XeF_4 .

EXAMPLE 6.2**Hybridization and Bonding Scheme**

Write a hybridization and bonding scheme for acetaldehyde.

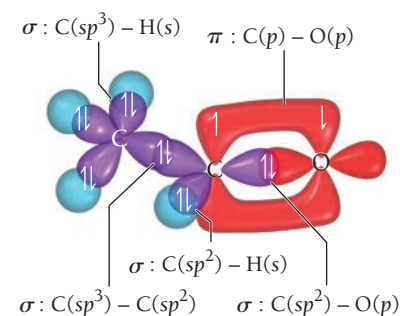
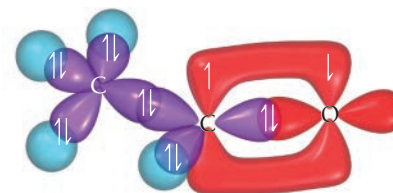
**SOLUTION**

Acetaldehyde has 18 valence electrons and the following Lewis structure:



The leftmost carbon atom has four electron groups and a tetrahedral electron geometry. The rightmost carbon atom has three electron groups and a trigonal planar geometry.

The leftmost carbon atom is sp^3 hybridized, and the rightmost carbon atom is sp^2 hybridized.

**FOR PRACTICE 6.2**

Write a hybridization and bonding scheme for HCN .

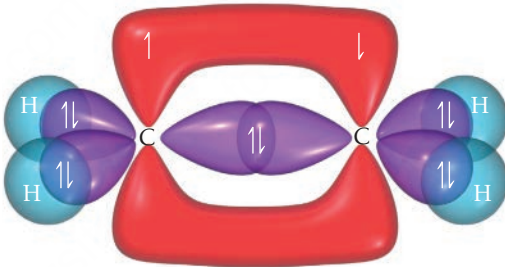
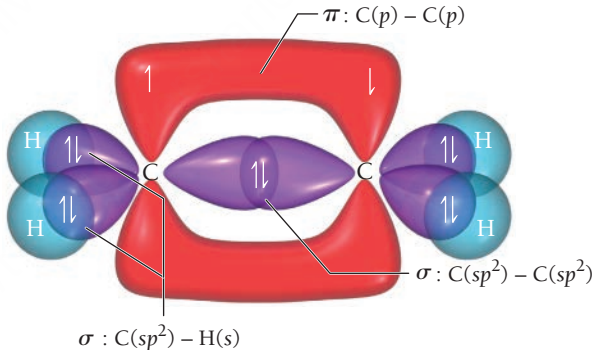
EXAMPLE 6.3

Hybridization and Bonding Scheme

Interactive
Worked Example
Video 6.3PEARSON
eText
2.0

Apply valence bond theory to write a hybridization and bonding scheme for ethene, $\text{H}_2\text{C}=\text{CH}_2$.

SOLUTION

1. Draw the Lewis structure for the molecule.	$\begin{array}{c} \text{H} \quad \text{H} \\ \quad \\ \text{H}-\text{C}=\text{C}-\text{H} \end{array}$
2. Apply VSEPR theory to predict the electron geometry about the central atom (or interior atoms).	The molecule has two interior atoms. Since each atom has three electron groups (one double bond and two single bonds), the electron geometry about each atom is trigonal planar.
3. Select the correct hybridization for the central atom (or interior atoms) based on the electron geometry (refer to Table 6.1).	A trigonal planar geometry corresponds to sp^2 hybridization.
4. Sketch the molecule, beginning with the central atom and its orbitals. Show overlap with the appropriate orbitals on the terminal atoms.	
5. Label all bonds using the σ or π notation followed by the type of overlapping orbitals.	

FOR PRACTICE 6.3

Apply valence bond theory to write a hybridization and bonding scheme for CO_2 .

FOR MORE PRACTICE 6.3

What is the hybridization of the central iodine atom in I_3^- ?

6.4 Molecular Orbital Theory: Electron Delocalization

Valence bond theory can account for much of what we observe in chemical bonding—such as the rigidity of a double bond—but it also has limitations. In valence bond theory, we treat electrons as if they reside in the quantum-mechanical orbitals that we calculated for *atoms*. This is a significant oversimplification that we partially compensate for by hybridization. Nevertheless, we can do better.

In Chapter 2, we learned that the mathematical derivation of energies and orbitals for electrons in *atoms* comes from solving the Schrödinger equation for the atom of interest. For a molecule, we can theoretically do the same thing. The resulting orbitals would be the actual **molecular orbitals (MOs)** of

the molecule as a whole. This is in contrast to valence bond theory, in which the orbitals are the atomic orbitals (AOs) of individual atoms. As it turns out, however, solving the Schrödinger equation exactly for even the simplest molecules is impossible without making some approximations.

In **molecular orbital (MO) theory**, we do not actually solve the Schrödinger equation for a molecule directly. Instead, we use a trial function, an “educated guess” as to what the solution might be. In other words, rather than mathematically solving the Schrödinger equation, which would give us a mathematical function describing an orbital, we start with a trial mathematical function for the orbital. We then test the trial function to see how well it “works.”

We can understand this process by analogy to solving an algebraic equation. Suppose we want to know what x is in the equation $4x + 5 = 70$ without actually solving the equation. For an easy equation like this one, we might first estimate that $x = 16$. We can then determine how well our estimate works by substituting $x = 16$ into the equation. If the estimate does not work, we can try again until we find the right value of x . (In this case, we can quickly see that x must be a little more than 16.)

In molecular orbital theory, the estimating procedure is analogous. However, we need one more concept to get at the heart of molecular orbital theory. In order to determine how well a trial function for an orbital “works” in molecular orbital theory, we calculate its energy. No matter how good our trial function, *we can never do better than nature at minimizing the energy of the orbital*. The best possible orbital is the one with the minimum energy.

In other words, to find the orbital that “works,” we must find the orbital with the lowest energy. To do this, we can devise any trial function for an orbital in a molecule and calculate its energy. The energy we calculate for the devised orbital then must always be greater than or (at best) equal to the energy of the actual orbital. In modern molecular orbital theory, computer programs are designed to try many different variations of a guessed orbital and compare the energies of each one. The variation with the lowest energy is the best approximation for the actual molecular orbital.

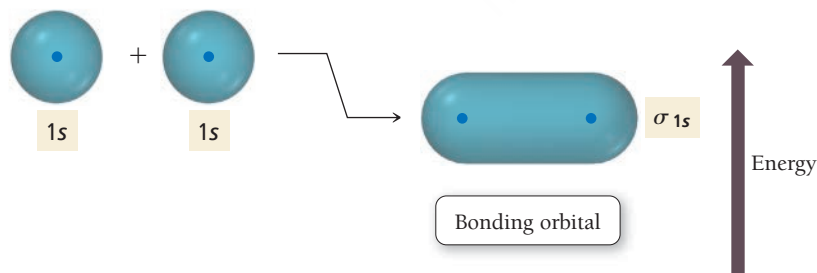
Molecular orbital theory is a specific application of a more general quantum-mechanical approximation technique called the variational principle. In this technique, the energy of a trial function within the Schrödinger equation is minimized.

We calculate the energy of an estimated orbital by substituting it into the Schrödinger equation and solving for the energy.

Linear Combination of Atomic Orbitals (LCAO)

The simplest trial functions that work reasonably well in molecular orbital theory turn out to be linear combinations of atomic orbitals, or LCAOs. An LCAO molecular orbital is a *weighted linear sum—analogue to a weighted average—of the valence atomic orbitals* of the atoms in the molecule. At first glance, this concept might seem similar to that of hybridization in valence bond theory. However, in valence bond theory, hybrid orbitals are weighted linear sums of the valence atomic orbitals of a *particular atom*, and the hybrid orbitals remain *localized* on that atom. In molecular orbital theory, the molecular orbitals are weighted linear sums of the valence atomic orbitals of *all the atoms* in a molecule, and many of the molecular orbitals are *delocalized* over the entire molecule.

Consider the H_2 molecule. One of the molecular orbitals for H_2 is an equally weighted sum of the $1s$ orbital from one atom and the $1s$ orbital from the other. We can represent this pictorially and energetically as follows:

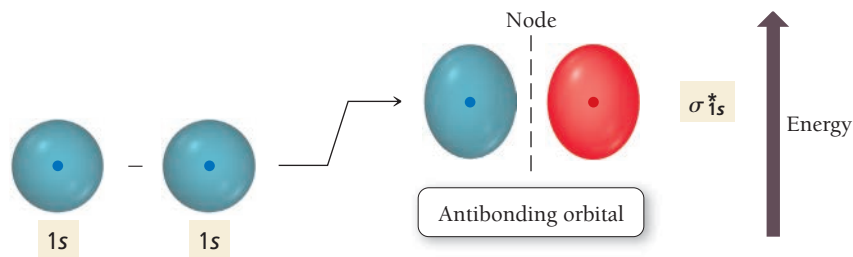


When molecular orbitals are calculated mathematically, it is actually the *wave functions* corresponding to the orbitals that are combined.

The name of this molecular orbital is σ_{1s} . The σ comes from the shape of the orbital, which looks like a σ bond in valence bond theory, and the $1s$ comes from its formation by a linear sum of $1s$ orbitals. The σ_{1s} orbital is lower in energy than either of the two $1s$ atomic orbitals from which it was formed. For this reason, we call this orbital a **bonding orbital**. When electrons occupy bonding molecular orbitals, the energy of the electrons is lower than it would be if they were occupying atomic orbitals.

We can think of a molecular orbital in a molecule in much the same way that we think about an atomic orbital in an atom. Electrons seek the lowest energy molecular orbital available, but just as an atom has more than one atomic orbital (and some may be empty), a molecule has more than one molecular orbital

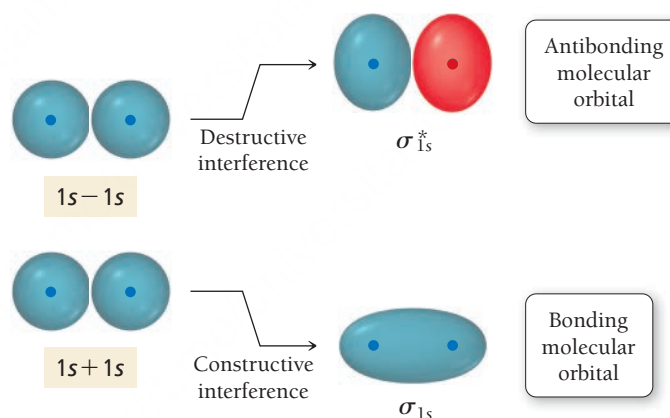
(and some may be empty). The next molecular orbital of H_2 is approximated by summing the $1s$ orbital on one hydrogen atom with the *negative* (opposite phase) of the $1s$ orbital on the other hydrogen atom:



The different phases of the orbitals result in *destructive* interference between them. The resulting molecular orbital therefore has a *node* between the two atoms. The different colors (red and blue) on either side of the node represent the different phases of the orbital (see Section 2.6). The name of this molecular orbital is σ_{1s}^* . The star indicates that this orbital is an **antibonding orbital**. Electrons in antibonding orbitals have higher energies than they had in their respective atomic orbitals and therefore tend to raise the energy of the system (relative to the unbonded atoms).

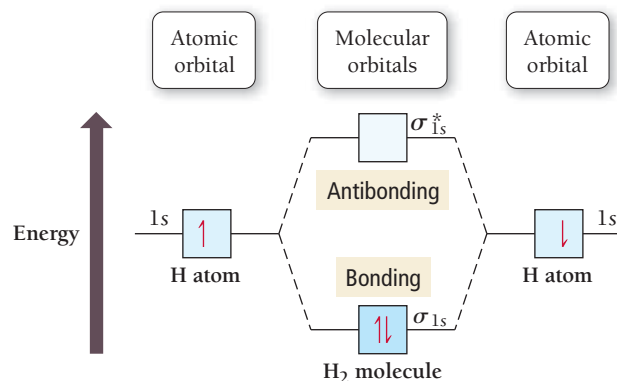
In general, when two atomic orbitals are added together to form molecular orbitals, one of the resultant molecular orbitals will be lower in energy (the bonding orbital) than the atomic orbitals and the other will be higher in energy (the antibonding orbital). Remember that electrons in orbitals behave like waves. The bonding molecular orbital arises out of *constructive* interference between the atomic orbitals because both orbitals have the same phase. The antibonding orbital arises out of *destructive* interference between the atomic orbitals because *subtracting* one from the other means the two interacting orbitals have opposite phases (**Figure 6.9** ▼).

► **FIGURE 6.9 Formation of Bonding and Antibonding Orbitals**
Constructive interference between two atomic orbitals gives rise to a molecular orbital that is lower in energy than the atomic orbitals. This is the bonding orbital. Destructive interference between two atomic orbitals gives rise to a molecular orbital that is higher in energy than the atomic orbitals. This is the antibonding orbital.



For this reason, the bonding orbital has an *increased* electron density in the internuclear region, while the antibonding orbital has a *node* in the internuclear region. The greater electron density in the internuclear region for a bonding orbital *lowers its energy* compared to the orbitals in nonbonded atoms. The diminished electron density in the internuclear region for an antibonding orbital (due to the node) *increases its energy* compared to the orbitals of nonbonded atoms.

We put all of this together in the molecular orbital (MO) diagram for H_2 :



The **molecular orbital (MO) diagram** shows the atomic orbitals of the atoms, the molecular orbitals of the molecule, and their relative energies (higher on the diagram corresponds to higher energy). Notice that two hydrogen atoms can lower their overall energy by forming H_2 because the electrons can move from higher-energy atomic orbitals into the lower-energy σ_{1s} bonding molecular orbital.

In molecular orbital theory, we define the **bond order** of a diatomic molecule such as H_2 as follows:

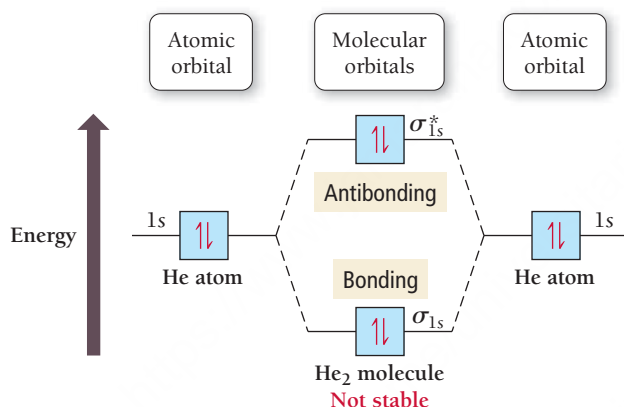
$$\text{bond order} = \frac{(\text{number of electrons in bonding MOs}) - (\text{number of electrons in antibonding MOs})}{2}$$

For H_2 , the bond order is 1.

$$\text{H}_2 \text{ bond order} = \frac{2 - 0}{2} = 1$$

A positive bond order means that there are more electrons in bonding molecular orbitals than in antibonding molecular orbitals. The electrons therefore have lower energy than they had in the orbitals of the isolated atoms, and a chemical bond forms. In general, the higher the bond order, the stronger the bond. A negative or zero bond order indicates that a bond will *not* form between the atoms.

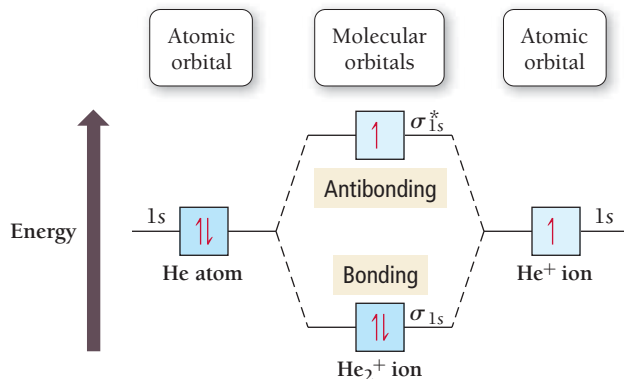
For example, consider the MO diagram for He_2 :



Notice that the two additional electrons must go into the higher-energy antibonding orbital. There is no net stabilization by joining two helium atoms to form a helium molecule, as indicated by the bond order:

$$\text{He}_2 \text{ bond order} = \frac{2 - 2}{2} = 0$$

So according to MO theory, He_2 should not exist as a stable molecule, and indeed it does not. Another interesting case is the helium–helium ion, He_2^+ , which we can represent with the following MO diagram:



The bond order is $\frac{1}{2}$, indicating that He_2^+ should exist, and indeed it does.

Summarizing LCAO–MO Theory:

- We can approximate molecular orbitals (MOs) as a linear combination of atomic orbitals (AOs). The total number of MOs formed from a particular set of AOs always equals the number of AOs in the set.
- When two AOs combine to form two MOs, one MO is lower in energy (the bonding MO) and the other is higher in energy (the antibonding MO).
- When assigning the electrons of a molecule to MOs, we fill the lowest energy MOs first with a maximum of two spin-paired electrons per orbital.
- When assigning electrons to two MOs of the same energy, we follow Hund's rule—fill the orbitals singly first, with parallel spins, before pairing.
- The bond order in a diatomic molecule is the number of electrons in bonding MOs minus the number in antibonding MOs divided by two. Stable bonds require a positive bond order (more electrons in bonding MOs than in antibonding MOs).

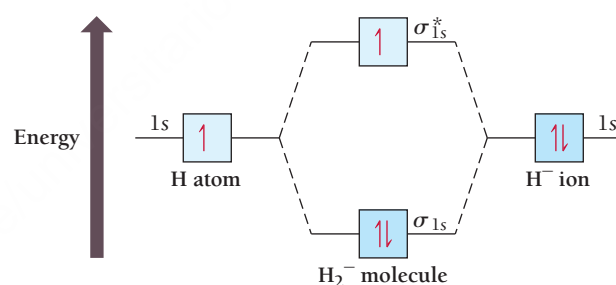
Notice the power of the molecular orbital approach. Every electron that enters a bonding molecular orbital stabilizes the molecule or polyatomic ion, and every electron that enters an antibonding molecular orbital destabilizes it. The emphasis on electron pairs has been removed. One electron in a bonding molecular orbital stabilizes half as much as two, so a bond order of one-half is not at all mysterious.

EXAMPLE 6.4**Bond Order**

Apply molecular orbital theory to predict the bond order in H_2^- . Is the H_2^- bond a stronger or weaker bond than the H_2 bond?

SOLUTION

The H_2^- ion has three electrons. Assign the three electrons to the molecular orbitals, filling lower-energy orbitals first and proceeding to higher-energy orbitals.



Calculate the bond order by subtracting the number of electrons in antibonding orbitals from the number in bonding orbitals and dividing the result by two.

$$\text{H}_2^- \text{ bond order} = \frac{2 - 1}{2} = +\frac{1}{2}$$

Since the bond order is positive, H_2^- should be stable. However, the bond order of H_2^- is lower than the bond order of H_2 (which is 1); therefore, the bond in H_2^- is weaker than in H_2 .

FOR PRACTICE 6.4

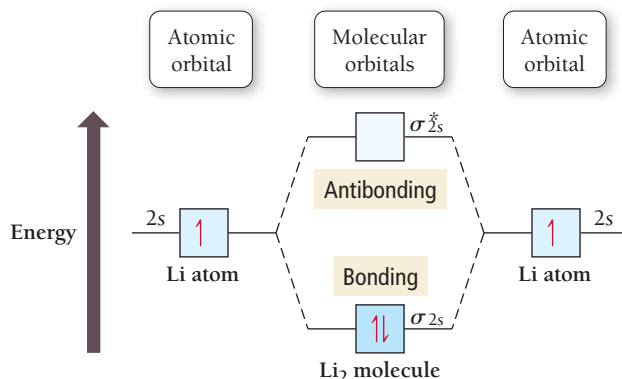
Apply molecular orbital theory to predict the bond order in H_2^+ . Is the H_2^+ bond a stronger or weaker bond than the H_2 bond?

The core electrons can be ignored (as they are in other models for bonding) because these electrons do not contribute significantly to chemical bonding.

Second-Period Homonuclear Diatomic Molecules

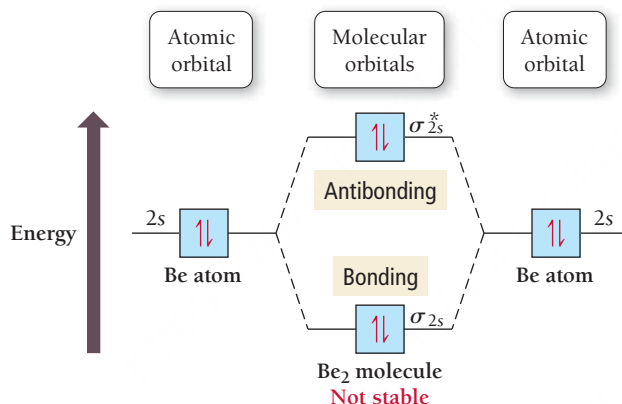
Homonuclear diatomic molecules (molecules made up of two atoms of the same kind) formed from second-period elements that have between 2 and 16 valence electrons. To explain bonding in these molecules, we must consider the next set of higher-energy molecular orbitals, which we can approximate by linear combinations of the valence atomic orbitals of the period 2 elements.

We begin with Li_2 . Even though lithium is normally a metal, we can use MO theory to predict whether or not the Li_2 molecule should exist in the gas phase. We approximate the molecular orbitals in Li_2 as linear combinations of the $2s$ atomic orbitals. The resulting molecular orbitals look much like those of the H_2 molecule. The MO diagram for Li_2 therefore looks a lot like the MO diagram for H_2 :



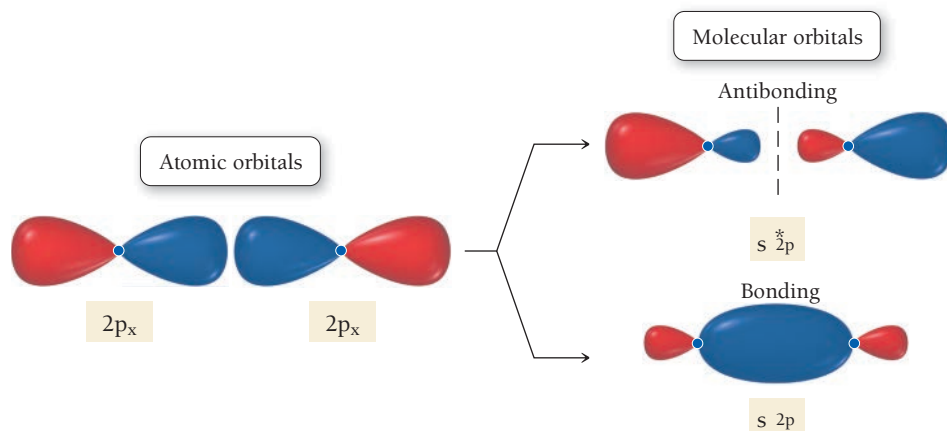
The two valence electrons of Li_2 occupy a bonding molecular orbital. We would predict that the Li_2 molecule is stable with a bond order of 1. Experiments confirm this prediction.

In contrast, consider the MO diagram for Be_2 :



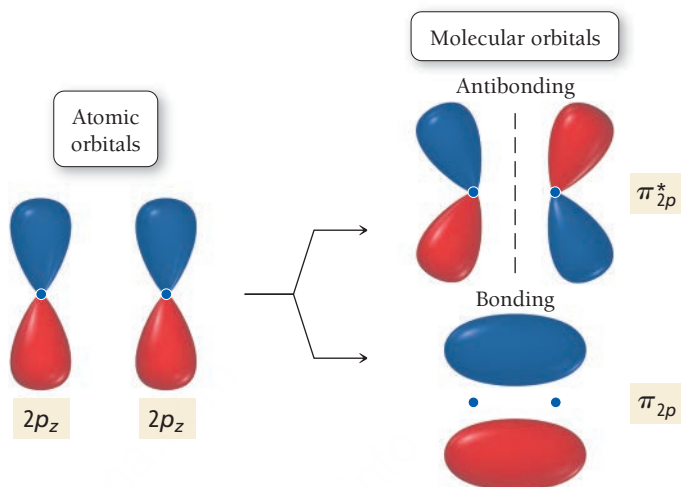
The four valence electrons of Be_2 occupy one bonding MO and one antibonding MO. The bond order is 0, and we predict that Be_2 should not be stable. This is again consistent with experimental findings.

The next homonuclear molecule composed of second-row elements is B_2 , which has six total valence electrons to accommodate. We can approximate the next higher-energy molecular orbitals for B_2 and the rest of the period 2 diatomic molecules as linear combinations of the $2p$ orbitals taken in pairs. Because the three $2p$ orbitals orient along three orthogonal axes, we must assign similar axes to the molecule. In this book, we assign the internuclear axis to be the x direction. The LCAO–MOs that result from combining the $2p_x$ orbitals—the orbitals that lie along the internuclear axis—from each atom are represented pictorially as follows:



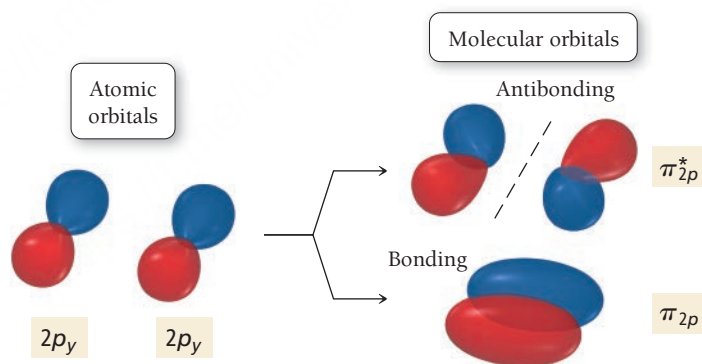
The bonding MO in this pair looks something like candy in a wrapper, with increased electron density in the internuclear region due to constructive interference between the two $2p$ atomic orbitals. It has the characteristic σ shape (it is cylindrically symmetrical about the bond axis) and is therefore called the σ_{2p} bonding orbital. The antibonding orbital, called σ_{2p}^* , has a node between the two nuclei (due to destructive interference between the two $2p$ orbitals) and is higher in energy than either of the $2p_x$ orbitals.

We represent the LCAO–MOs that result from combining the $2p_z$ orbitals from each atom as follows:



Notice that in this case the p orbitals are added together in a side-by-side orientation (in contrast to the $2p_x$ orbitals which are oriented end to end). The resultant molecular orbitals consequently have a different shape. The electron density in the bonding molecular orbital is above and below the internuclear axis with a nodal plane that includes the internuclear axis. This orbital resembles the electron density distribution of a π bond in valence bond theory. We call this orbital the π_{2p} orbital. The corresponding antibonding orbital has an additional node *between* the nuclei (perpendicular to the internuclear axis) and is called the π_{2p}^* orbital.

We represent the LCAO–MOs that result from combining the $2p_y$ orbitals from each atom as follows:



The only difference between the $2p_y$ and the $2p_z$ atomic orbitals is a 90° rotation about the internuclear axis. Consequently, the only difference between the resulting MOs is a 90° rotation about the internuclear axis. The energies and the names of the bonding and antibonding MOs obtained from the combination of the $2p_y$ AOs are identical to those obtained from the combination of the $2p_z$ AOs.

Before we can draw MO diagrams for B_2 and the other second-period diatomic molecules, we must determine the relative energy ordering of the MOs obtained from the $2p$ AO combinations. This is not a simple task. The relative ordering of MOs obtained from LCAO–MO theory is usually determined computationally. There is no single order that works for all molecules. For second-period diatomic molecules, computations reveal that the energy ordering for B_2 , C_2 , and N_2 is slightly different from that for O_2 , F_2 , and Ne_2 as shown in **Figure 6.10**.

The difference in energy ordering can only be explained by going back to our LCAO–MO model. In our simplified treatment, we assumed that the MOs that result from the second-period AOs could be calculated pairwise. In other words, we took the linear combination of a $2s$ from one atom with the

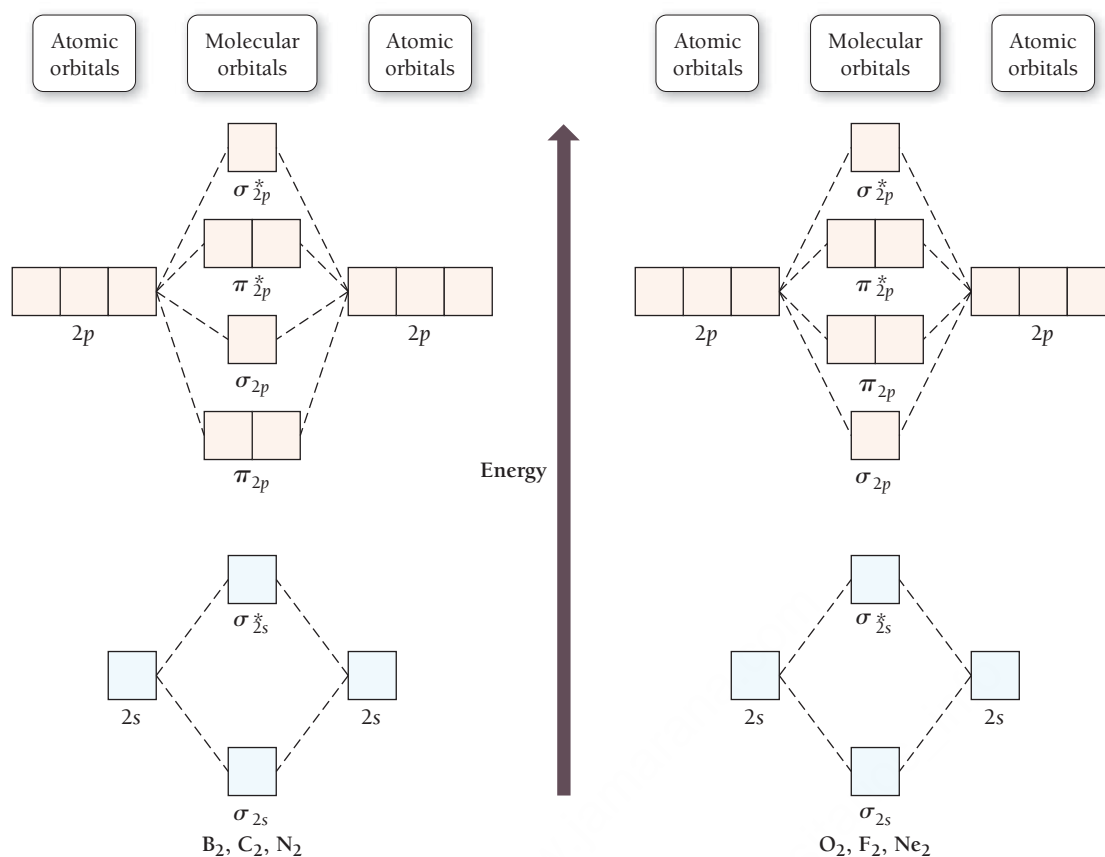


FIGURE 6.10 Molecular Orbital Energy Ordering Molecular orbital energy diagrams for second-period diatomic molecules show that the energy ordering of the π_{2p} and σ_{2p} molecular orbitals can vary.

2s from another, a $2p_x$ from one atom with a $2p_x$ from the other, and so on. In a more comprehensive treatment, the MOs are formed from linear combinations that include all of the AOs that are relatively close to each other in energy and of the correct symmetry. Specifically, in a more detailed treatment, the two 2s orbitals and the two $2p_x$ orbitals should all be combined to form a total of four molecular orbitals. The extent to which this type of mixing is included affects the energy levels of the corresponding MOs, as shown in **Figure 6.11**. The bottom line is that s – p mixing is significant in B₂, C₂, and N₂ but not in O₂, F₂, and Ne₂. The result is a different energy ordering, depending on the specific molecule.

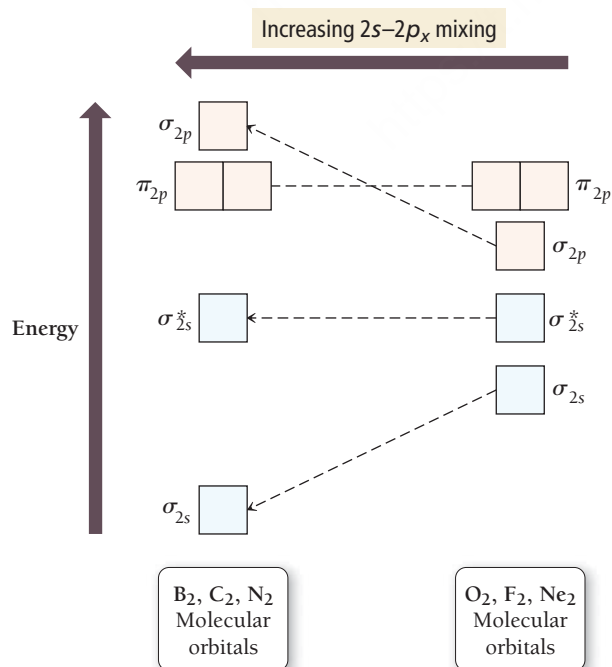


FIGURE 6.11 The Effects of 2s–2p Mixing The degree of mixing between two orbitals decreases as the energy difference between them increases. The energy levels of the atomic orbitals are more closely spaced in B, C, and N than in O, F, and Ne. Therefore, mixing of the 2s and $2p_x$ orbitals is greater in B₂, C₂, and N₂ than in O₂, F₂, and Ne₂. This mixing produces a difference in energy ordering for the π_{2p} and σ_{2p} molecular orbitals.

► **FIGURE 6.12** Molecular Orbital Energy Diagrams for Second-Period *p*-Block Homonuclear Diatomic Molecules

	Large $2s-2p_x$ interaction			Small $2s-2p_x$ interaction		
	B_2	C_2	N_2	O_2	F_2	Ne_2
σ_{2p}^*						
π_{2p}^*						
σ_{2p}						
π_{2p}						
σ_{2s}^*						
σ_{2s}						
Bond order	1	2	3	2	1	0
Bond energy (kJ/mol)	290	620	946	498	159	—
Bond length (pm)	159	131	110	121	143	—



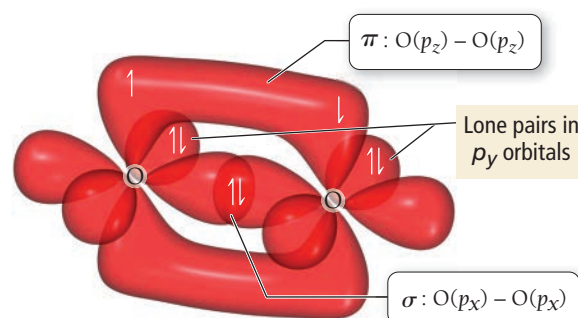
▲ Liquid oxygen can be suspended between the poles of a magnet because it is paramagnetic. It contains unpaired electrons (depicted here in the inset) that generate tiny magnetic fields, which align with and interact with the external field.

The MO energy diagrams for the rest of the second-period homonuclear diatomic molecules, as well as their bond orders, bond energies, and bond lengths, are shown in **Figure 6.12** ▲. Notice that as bond order increases, the bond gets stronger (greater bond energy) and shorter (smaller bond length). For B_2 , with six electrons, the bond order is 1. For C_2 , the bond order is 2, and for N_2 , the bond order reaches a maximum with a value of 3. Recall that the Lewis structure for N_2 has a triple bond, so both the Lewis model and molecular orbital theory predict a strong bond for N_2 , which is experimentally observed.

In O_2 , the two additional electrons occupy antibonding orbitals and the bond order is 2. These two electrons are unpaired—they occupy the π_{2p}^* orbitals *singly with parallel spins*, as indicated by Hund's rule. The presence of unpaired electrons in the molecular orbital diagram of oxygen explains why oxygen is *paramagnetic* (see

Section 6.1)—it is attracted to a magnetic field. The paramagnetism of oxygen can be demonstrated by suspending liquid oxygen between the poles of a magnet. This magnetic property is the direct result of *unpaired electrons*, whose spin and movement around the nucleus (more accurately known as orbital angular momentum) generate tiny magnetic fields.

In the Lewis structure of O_2 , as well as in the valence bond model of O_2 , all of the electrons seem to be paired:



The $2s$ orbital on each O atom contains two electrons, but for clarity neither the s orbitals nor the electrons that occupy them are shown.

In the MO diagram for O_2 , in contrast, we can account for the unpaired electrons. Molecular orbital theory is the more powerful theory in that it can account for the paramagnetism of O_2 —it gives us a picture of bonding that more closely corresponds to what we see in experiments. Continuing along the second-period homonuclear diatomic molecules, we see that F_2 has a bond order of 1 and Ne_2 has a bond order of 0, again consistent with experiment since F_2 exists and Ne_2 does not.

EXAMPLE 6.5

Molecular Orbital Theory

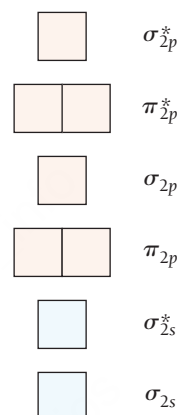
Interactive
Worked Example
Video 6.5

PEARSON
eText
2.0

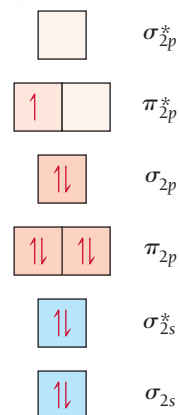
Draw an MO energy diagram and determine the bond order for the N_2^- ion. Do you expect the bond in the N_2^- ion to be stronger or weaker than the bond in the N_2 molecule? Is N_2^- diamagnetic or paramagnetic?

SOLUTION

Write an energy-level diagram for the molecular orbitals in N_2^- . Use the energy ordering for N_2 .



The N_2^- ion has 11 valence electrons (five for each nitrogen atom plus one for the negative charge). Assign the electrons to the molecular orbitals beginning with the lowest energy orbitals and following Hund's rule.



Calculate the bond order by subtracting the number of electrons in antibonding orbitals from the number in bonding orbitals and dividing the result by two.

$$N_2^- \text{ bond order} = \frac{8 - 3}{2} = +2.5$$

The bond order is 2.5, which is a lower bond order than in the N_2 molecule (bond order = 3); therefore, the N_2^- bond is weaker. The MO diagram shows that the N_2^- ion has one unpaired electron and is therefore paramagnetic.

FOR PRACTICE 6.5

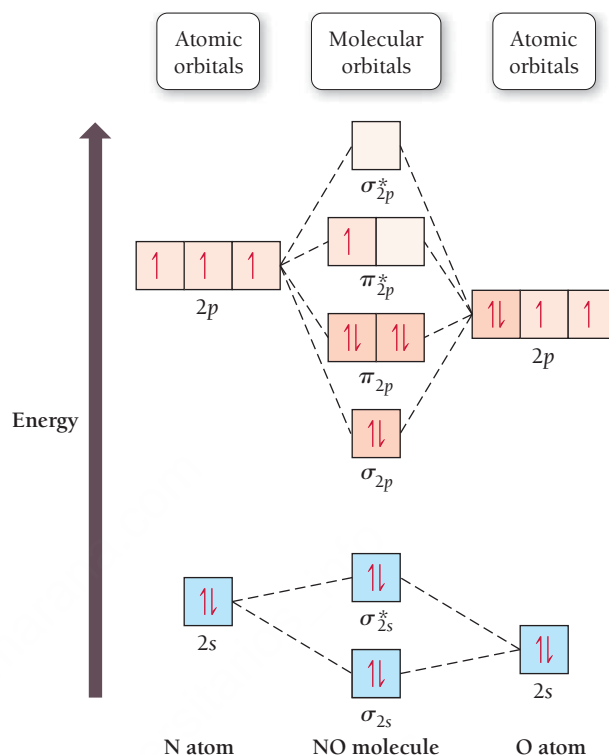
Draw an MO energy diagram and determine the bond order for the N_2^+ ion. Do you expect the bond in the N_2^+ ion to be stronger or weaker than the bond in the N_2 molecule? Is N_2^+ diamagnetic or paramagnetic?

FOR MORE PRACTICE 6.5

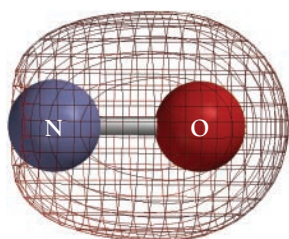
Apply molecular orbital theory to determine the bond order of Ne_2 .

Second-Period Heteronuclear Diatomic Molecules

We can also apply molecular orbital theory to heteronuclear diatomic molecules (molecules that include two different atoms). For example, we can draw an MO diagram for NO as follows:



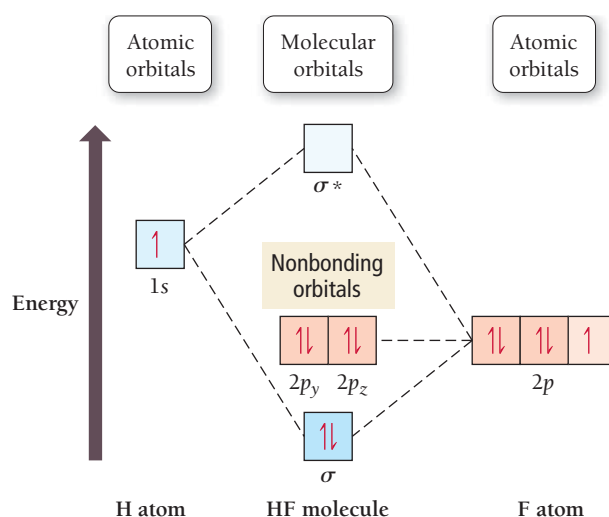
A given orbital has lower energy in a more electronegative atom. For this reason, electronegative atoms have the ability to attract electrons to themselves.



▲ FIGURE 6.13 Shape of σ_{2s} Bonding Orbital in NO The molecular orbital shows greater electron density at the oxygen end of the molecule because the atomic orbitals of oxygen, the more electronegative element, are lower in energy than those of nitrogen. The atomic orbitals of oxygen therefore contribute more to the bonding molecular orbital than those of nitrogen.

Oxygen is more electronegative than nitrogen, so its atomic orbitals are lower in energy than nitrogen's atomic orbitals. When two atomic orbitals are identical and of equal energy, the contribution of each orbital in forming a molecular orbital is identical. However, when two atomic orbitals are different, the contribution of each orbital in forming a molecular orbital may be different. More specifically, when we approximate a molecular orbital as a linear combination of atomic orbitals of different energies, the lower-energy atomic orbital makes a greater contribution to the bonding molecular orbital and the higher-energy atomic orbital makes a greater contribution to the antibonding molecular orbital. For example, notice that the σ_{2s} bonding orbital is closer in energy to the oxygen $2s$ orbital than to the nitrogen $2s$ orbital. We can also see this unequal weighting in the shape of the resultant molecular orbital, in which the electron density is concentrated on the oxygen atom, as shown in **Figure 6.13** ◀.

As another example of a heteronuclear diatomic molecule, consider the MO diagram for HF:



Fluorine is so electronegative that all of its atomic orbitals are lower in energy than hydrogen's atomic orbitals. In fact, fluorine's 2s orbital is so low in energy compared to hydrogen's 1s orbital that it does not contribute significantly to the molecular orbitals. The molecular orbitals in HF are approximated by the linear combination of the fluorine 2p_x orbital and the hydrogen 1s orbital. The other 2p orbitals remain localized on the fluorine and appear in the energy diagram as **nonbonding orbitals**. The electrons in these nonbonding orbitals remain localized on the fluorine atom.

EXAMPLE 6.6

Molecular Orbital Theory for Heteronuclear Diatomic Molecules and Ions

Apply molecular orbital theory to determine the bond order of the CN[−] ion. Is the ion paramagnetic or diamagnetic?

SOLUTION

Determine the number of valence electrons in the molecule or ion.	Number of valence electrons = 4(from C) + 5(from N) + 1(from negative charge) = 10
Write an energy-level diagram using Figure 6.12 as a guide. Fill the orbitals beginning with the lowest energy orbital and progressing upward until you have assigned all electrons to an orbital. Remember to allow no more than two electrons (with paired spins) per orbital and to fill degenerate orbitals with single electrons (with parallel spins) before pairing.	
Calculate the bond order using the formula: Bond order = $\frac{(\text{number of } e^- \text{ in bonding MOs}) - (\text{number of } e^- \text{ in antibonding MOs})}{2}$	CN [−] bond order = $\frac{8 - 2}{2} = +3$
If the MO energy diagram has unpaired electrons, the molecule or ion is paramagnetic. If the electrons are all paired, the molecule or ion is diamagnetic.	Since the MO diagram has no unpaired electrons, the ion is diamagnetic.

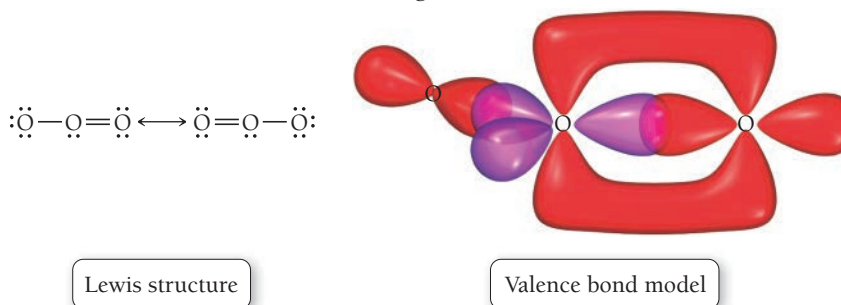
FOR PRACTICE 6.6

Apply molecular orbital theory to determine the bond order of NO. (Use the energy ordering of N₂.) Is the molecule paramagnetic or diamagnetic?


6.5 Molecular Orbital Theory: Polyatomic Molecules

With the aid of computers, we can apply molecular orbital theory to polyatomic molecules and ions, yielding results that correlate very well with experimental measurements. These applications are beyond the scope of this text. However, the delocalization of electrons over an entire molecule is an important

contribution of molecular orbital theory to our basic understanding of chemical bonding. For example, consider the Lewis structure and valence bond diagram of ozone:

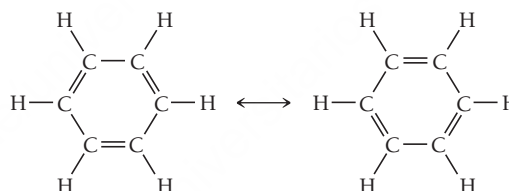


In the Lewis model, we use resonance forms to represent the two equivalent bonds. In valence bond theory, it appears that the two oxygen–oxygen bonds differ from each other. Molecular orbital theory, however, indicates that the π molecular orbitals in ozone form from a linear combination of the three oxygen $2p$ orbitals and are delocalized over the entire molecule. The lowest energy π bonding molecular orbital in ozone is shown here:




When we examine ozone in nature, we indeed find two equivalent bonds.

A similar situation occurs with benzene (C_6H_6). In the Lewis model, we represent the structure with two resonance forms:



In molecular orbital theory, the π molecular orbitals in benzene form from a linear combination of the six carbon $2p$ orbitals and delocalize over the entire molecule. The lowest energy π bonding molecular orbital is shown here:



Benzene is in fact a highly symmetric molecule with six identical carbon–carbon bonds. The most accurate picture of the π electrons in benzene is one in which the electrons occupy roughly circular-shaped orbitals above and below the plane of the molecule in accordance with the molecular orbital theory approach.

SELF-ASSESSMENT



QUIZ

- Determine the hybridization about O in CH_3OH .
a) sp b) sp^2 c) sp^3 d) sp^3d
- Determine the hybridization about C in H_2CO .
a) sp b) sp^2 c) sp^3 d) sp^3d
- According to valence bond theory, which kind of orbitals overlap to form the P—Cl bonds in PCl_5 ?
a) $\text{P}(sp^3) - \text{Cl}(p)$
b) $\text{P}(sp^3d) - \text{Cl}(s)$
c) $\text{P}(sp^3) - \text{Cl}(s)$
d) $\text{P}(sp^3d) - \text{Cl}(p)$
- Use molecular orbital theory to determine the bond order in C_2 .
a) 0 b) 1 c) 2 d) 3
- Use molecular orbital theory to predict which species has the strongest bond.
a) N_2
b) N_2^-
c) N_2^+
d) All bonds are equivalent according to molecular orbital theory.
- Use molecular orbital theory to determine which molecule is diamagnetic.
a) CO
b) B_2
c) O_2
d) none of the above (all are paramagnetic)
- Which hybridization scheme occurs about nitrogen when nitrogen forms a double bond?
a) sp b) sp^2 c) sp^3 d) sp^3d
- What is the hybridization about a central atom that has five total electron groups, with three of those being bonding groups and two being lone pairs?
a) sp b) sp^2 c) sp^3 d) sp^3d
- Determine the correct hybridization (from left to right) about each interior atom in $\text{CH}_3\text{CH}_2\text{OH}$.
a) 1st C sp^3 ; 2nd C sp^2 ; O sp
b) 1st C sp^3 ; 2nd C sp^3 ; O sp^3
c) 1st C sp ; 2nd C sp^2 ; O sp^3
d) 1st C sp^3 ; 2nd C sp^2 ; O sp^2
- The central atom in a molecule has a bent molecular geometry. Determine the hybridization of the orbitals in the atom.
a) sp
b) sp^2
c) sp^3
d) unable to determine from information given
- Which type of orbitals overlap to form the sigma bond between C and N in $\text{H}-\text{C}\equiv\text{N}:$?
a) $\text{C}(sp^3) - \text{N}(p)$
b) $\text{C}(sp^2) - \text{N}(p)$
c) $\text{C}(sp) - \text{N}(p)$
d) $\text{C}(sp^3) - \text{N}(sp^3)$

Answers: 1. c; 2. b; 3. d; 4. c; 5. a; 6. a; 7. b; 8. d; 9. b; 10. d; 11. c

CHAPTER SUMMARY

6

REVIEW

MasteringChemistry™ provides end-of-chapter exercises, feedback-enriched tutorial problems, animations, and interactive activities to encourage problem solving practice and deeper understanding of key concepts and topics.

KEY LEARNING OUTCOMES

CHAPTER OBJECTIVES	ASSESSMENT
Write Hybridization and Bonding Schemes Using Valence Bond Theory (6.3)	<ul style="list-style-type: none"> Examples 6.1, 6.2, 6.3 For Practice 6.1, 6.2, 6.3 For More Practice 6.3 Exercises 33–38
Draw Molecular Orbital Energy Diagrams and Predict Bond Order in a Homonuclear Diatomic Molecule (6.4)	<ul style="list-style-type: none"> Examples 6.4, 6.5 For Practice 6.4, 6.5 For More Practice 6.5 Exercises 41–52
Draw Molecular Orbital Energy Diagrams and Predict Magnetic Properties in a Heteronuclear Diatomic Molecule (6.4)	<ul style="list-style-type: none"> Example 6.6 For Practice 6.6 Exercises 53, 54

KEY TERMS

Section 6.2

valence bond theory (252)
atomic orbitals (AO) (252)

Section 6.3

hybridization (255)
hybrid orbitals (255)

pi (π) bond (258)

sigma (σ) bond (258)
isomer (260)

Section 6.4

molecular orbital (MO) (266)
molecular orbital (MO) theory (267)

bonding orbital (267)

antibonding orbital (268)
molecular orbital (MO) diagram (269)

bond order (269)

nonbonding orbital (277)

KEY CONCEPTS

Valence Bond Theory (6.2, 6.3)

- In contrast to the Lewis model, in which a covalent chemical bond is the sharing of electrons represented by dots, in valence bond theory a chemical bond is the overlap of half-filled atomic orbitals (or in some cases the overlap between a completely filled orbital and an empty one).
- The overlapping orbitals may be the standard atomic orbitals, such as $1s$ or $2p$, or they may be hybridized atomic orbitals, which are mathematical combinations of the standard orbitals on a single atom. The basic hybridized orbitals are sp , sp^2 , sp^3 , sp^3d , and sp^3d^2 .
- The geometry of the molecule is determined by the geometry of the overlapping orbitals.
- In valence bond theory, we distinguish between two types of bonds, σ (sigma) and π (pi). In a σ bond, the orbital overlap occurs in the region that lies directly between the two bonding atoms. In a π bond, formed from the side-by-side overlap of p orbitals, the overlap occurs above and below the region that lies directly between the two bonding atoms.

- Rotation about a σ bond is relatively free, while rotation about a π bond is restricted.
- In our treatment of valence bond theory, we use the molecular geometry determined by VSEPR theory to determine the correct hybridization scheme.

Molecular Orbital Theory (6.4, 6.5)

- The simplest molecular orbitals are linear combinations of atomic orbitals (LCAOs), weighted averages of the atomic orbitals of the different atoms in the molecule.
- When two atomic orbitals combine to form molecular orbitals, they form one molecular orbital of lower energy (the bonding orbital) and one of higher energy (the antibonding orbital).
- A set of molecular orbitals is filled in much the same way as a set of atomic orbitals.
- The stability of the molecule and the strength of the bond depend on the number of electrons in bonding orbitals compared to the number in antibonding orbitals.

KEY EQUATIONS AND RELATIONSHIPS

Bond Order of a Diatomic Molecule (6.4)

$$\text{Bond order} = \frac{(\text{number of electrons in bonding MOs}) - (\text{number of electrons in antibonding MOs})}{2}$$

EXERCISES

REVIEW QUESTIONS

1. Why do we use other bonding theories in addition to the Lewis model?
2. What is a chemical bond according to valence bond theory?
3. In valence bond theory, what determines the geometry of a molecule?
4. In valence bond theory, the interaction energy between the electrons and nucleus of one atom with the electrons and nucleus of another atom is usually negative (stabilizing) when _____.
5. What is hybridization? Why is hybridization necessary in valence bond theory?
6. How does hybridization of the atomic orbitals in the central atom of a molecule help lower the overall energy of the molecule?
7. How is the *number* of hybrid orbitals related to the number of standard atomic orbitals that are hybridized?
8. Sketch each hybrid orbital.
 - a. sp
 - b. sp^2
 - c. sp^3
 - d. sp^3d
 - e. sp^3d^2
9. In the Lewis model, the two bonds in a double bond look identical. However, valence bond theory shows that they are not. Describe a double bond according to valence bond theory. Explain why rotation is restricted about a double bond but not about a single bond.
10. Name the hybridization scheme that corresponds to each electron geometry.
 - a. linear
 - b. trigonal planar
 - c. tetrahedral
 - d. trigonal bipyramidal
 - e. octahedral
11. What is a chemical bond according to molecular orbital theory?

12. Explain the difference between hybrid atomic orbitals in valence bond theory and LCAO molecular orbitals in molecular orbital theory.
13. What is a bonding molecular orbital?
14. What is an antibonding molecular orbital?
15. What is the role of wave interference in determining whether a molecular orbital is bonding or antibonding?
16. In molecular orbital theory, what is bond order? Why is it important?
17. How is the number of molecular orbitals approximated by a linear combination of atomic orbitals related to the number of atomic orbitals used in the approximation?
18. Sketch each molecular orbital.

a. σ_{2s}	b. σ_{2s}^*
c. σ_{2p}	d. σ_{2p}^*
e. π_{2p}	f. π_{2p}^*
19. Draw an energy diagram for the molecular orbitals of period 2 diatomic molecules. Show the difference in ordering for B_2 , C_2 , and N_2 compared to O_2 , F_2 , and Ne_2 .
20. Why does the energy ordering of the molecular orbitals of the second-period diatomic molecules change in going from N_2 to O_2 ?
21. Explain the difference between a paramagnetic species and a diamagnetic one.
22. When applying molecular orbital theory to heteronuclear diatomic molecules, the atomic orbitals used may be of different energies. If two atomic orbitals of different energies make two molecular orbitals, how are the energies of the molecular orbitals related to the energies of the atomic orbitals? How is the shape of the resultant molecular orbitals related to the shapes of the atomic orbitals?
23. In molecular orbital theory, what is a nonbonding orbital?
24. Write a short paragraph describing chemical bonding according to the Lewis model, valence bond theory, and molecular orbital theory. Indicate how the theories differ in their description of a chemical bond and indicate the strengths and weaknesses of each theory. Which theory is correct?

PROBLEMS BY TOPIC

Note: Answers to all odd-numbered Problems, numbered in blue, can be found in Appendix III. Exercises in the Problems by Topic section are paired, with each odd-numbered problem followed by a similar even-numbered problem. Exercises in the Cumulative Problems section are also paired but somewhat more loosely. Because of their nature, Challenge Problems and Conceptual Problems are unpaired.

Valence Bond Theory

25. The valence electron configurations of several atoms are shown below. How many bonds can each atom make without hybridization?

a. Be $2s^2$	b. P $3s^2 3p^3$	c. F $2s^2 2p^5$
--------------	------------------	------------------
26. The valence electron configurations of several atoms are shown below. How many bonds can each atom make without hybridization?

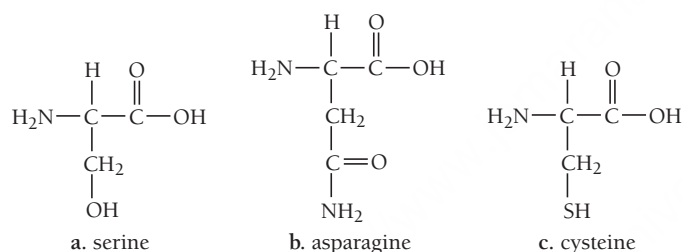
a. B $2s^2 2p^1$	b. N $2s^2 2p^3$	c. O $2s^2 2p^4$
------------------	------------------	------------------
27. Draw orbital diagrams (boxes with arrows in them) to represent the electron configurations—without hybridization—for all the atoms in PH_3 . Circle the electrons involved in bonding. Draw a three-dimensional sketch of the molecule and show orbital overlap. What bond angle do you expect from the unhybridized orbitals? How well does valence bond theory agree with the experimentally measured bond angle of 93.3° ?
28. Draw orbital diagrams (boxes with arrows in them) to represent the electron configurations—without hybridization—for all the atoms in SF_2 . Circle the electrons involved in bonding. Draw a three-dimensional sketch of the molecule and show orbital overlap. What bond angle do you expect from the unhybridized orbitals? How well does valence bond theory agree with the experimentally measured bond angle of 98.2° ?
29. Draw orbital diagrams (boxes with arrows in them) to represent the electron configuration of carbon before and after sp^3 hybridization.
30. Draw orbital diagrams (boxes with arrows in them) to represent the electron configurations of carbon before and after sp hybridization.
31. Which hybridization scheme allows the formation of at least one π bond?

$$sp^3, sp^2, sp^2d^2$$
32. Which hybridization scheme allows the central atom to form more than four bonds?

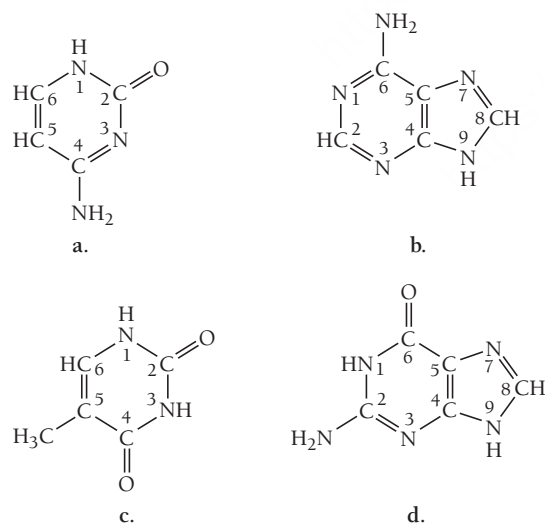
$$sp^3, sp^3d, sp^2$$
33. Write a hybridization and bonding scheme for each molecule. Sketch the molecule, including overlapping orbitals, and label all bonds using the notation shown in Examples 6.1 and 6.2.
 - a. CCl_4
 - b. NH_3
 - c. OF_2
 - d. CO_2
34. Write a hybridization and bonding scheme for each molecule. Sketch the molecule, including overlapping orbitals, and label all bonds using the notation shown in Examples 6.1 and 6.2.
 - a. CH_2Br_2
 - b. SO_2
 - c. NF_3
 - d. BF_3
35. Write a hybridization and bonding scheme for each molecule or ion. Sketch the structure, including overlapping orbitals, and label all bonds using the notation shown in Examples 6.1 and 6.2.
 - a. $COCl_2$ (carbon is the central atom)
 - b. BrF_5
 - c. XeF_2
 - d. I_3

CUMULATIVE PROBLEMS

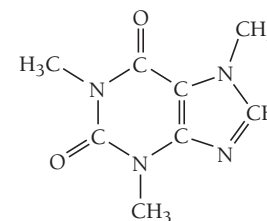
55. For each compound, draw the Lewis structure, determine the geometry using VSEPR theory, determine whether the molecule is polar, identify the hybridization of all interior atoms, and make a sketch of the molecule, according to valence bond theory, showing orbital overlap.
- COF_2 (carbon is the central atom)
 - S_2Cl_2 (ClSSCl)
 - SF_4
56. For each compound, draw the Lewis structure, determine the geometry using VSEPR theory, determine whether the molecule is polar, identify the hybridization of all interior atoms, and make a sketch of the molecule, according to valence bond theory, showing orbital overlap.
- IF_5
 - CH_2CHCH_3
 - CH_3SH
57. Amino acids are biological compounds that link together to form proteins, the workhorse molecules in living organisms. The skeletal structures of several simple amino acids are shown here. For each skeletal structure, determine the hybridization about each interior atom.



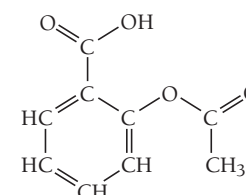
58. The genetic code is based on four different bases with the structures shown here. Determine the hybridization in each interior atom in these four bases.
- cytosine
 - adenine
 - thymine
 - guanine



59. The structure of caffeine, present in coffee and many soft drinks, is shown here. How many pi bonds are present in caffeine? How many sigma bonds? Insert the lone pairs in the molecule. Which kinds of orbitals do the lone pairs occupy?



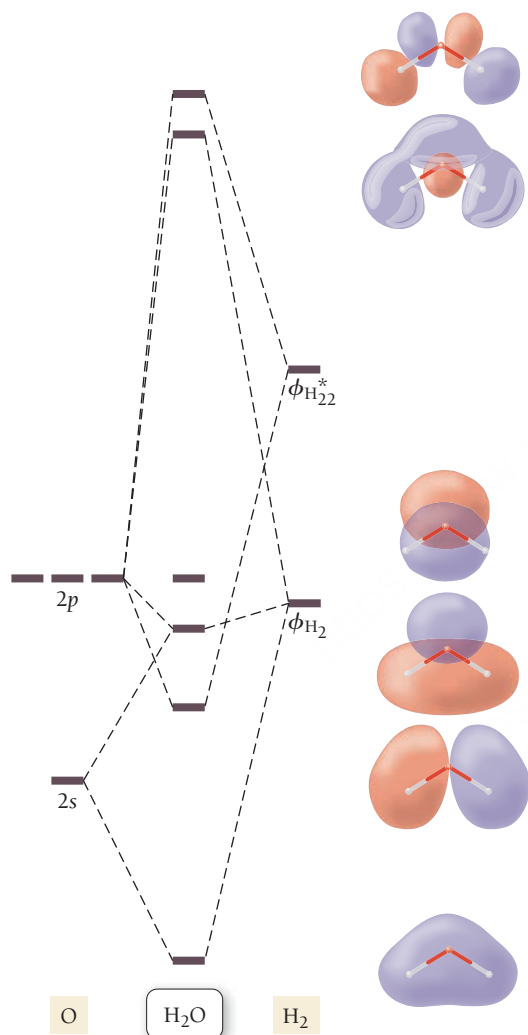
60. The structure of acetylsalicylic acid (aspirin) is shown here. How many pi bonds are present in acetylsalicylic acid? How many sigma bonds? Which parts of the molecule are free to rotate? Which parts are rigid?



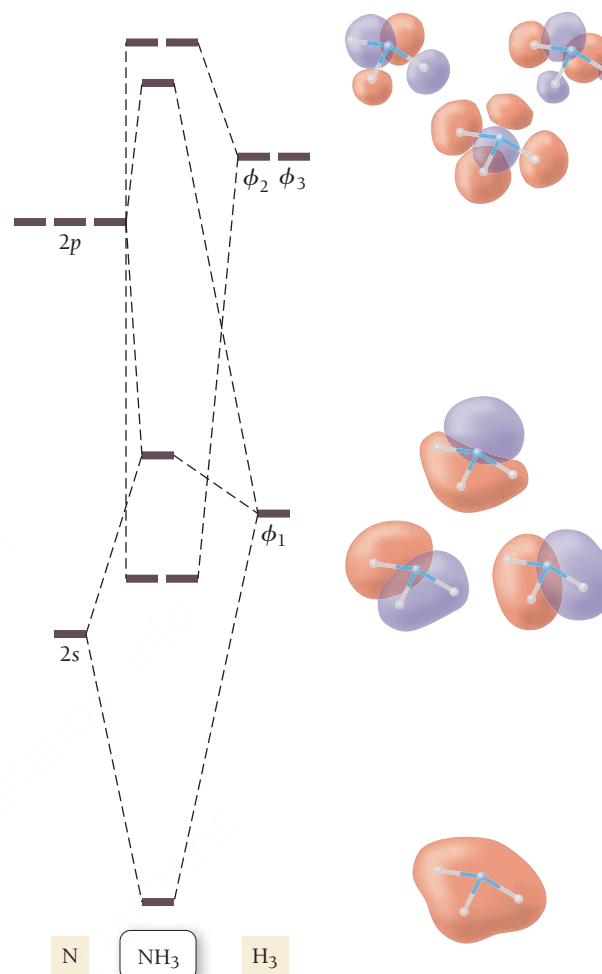
61. Draw a molecular orbital energy diagram for ClF . (Assume that the σ_p orbitals are lower in energy than the π orbitals.) What is the bond order in ClF ?
62. Draw Lewis structures and MO diagrams for CN^+ , CN , and CN^- . According to the Lewis model, which species is most stable? According to MO theory, which species is most stable? Do the two theories agree?
63. Bromine can form compounds or ions with any number of fluorine atoms from one to five. Write the formulas of all five of these species, assign a hybridization, and describe their electron and molecular geometry.
64. The compound C_3H_4 has two double bonds. Describe its bonding and geometry, using a valence bond approach.
65. How many hybrid orbitals do we use to describe each molecule?
- N_2O_5
 - $\text{C}_2\text{H}_5\text{NO}$ (4 C—H bonds and one O—H bond)
 - BrCN (no formal charges)
66. Indicate which orbitals overlap to form the σ bonds in each compound.
- BeBr_2
 - HgCl_2
 - ICN

CHALLENGE PROBLEMS

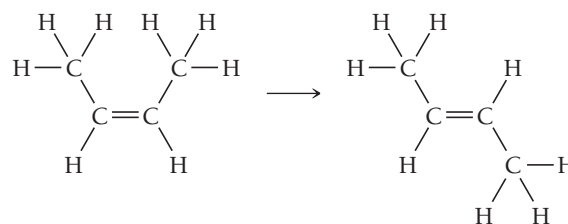
67. In VSEPR theory, which uses the Lewis model to determine molecular geometry, the trend of decreasing bond angle in CH_4 , NH_3 , and H_2O is accounted for by the greater repulsion of lone pair electrons compared to bonding pair electrons. How is this trend accounted for in valence bond theory?
68. The results of a molecular orbital calculation for H_2O are shown here. Examine each of the orbitals and classify them as bonding, antibonding, or nonbonding. Assign the correct number of electrons to the energy diagram. According to this energy diagram, is H_2O stable? Explain.



69. The results of a molecular orbital calculation for NH_3 are shown here. Examine each of the orbitals and classify them as bonding, antibonding, or nonbonding. Assign the correct number of electrons to the energy diagram. According to this energy diagram, is NH_3 stable? Explain.



70. *cis*-2-Butene isomerizes (changes its structure) to *trans*-2-butene via the reaction:



- If isomerization requires breaking the pi bond, what minimum energy is required for isomerization in J/mol? In J/molecule?
 - If the energy for isomerization comes from light, what minimum frequency of light is required? In what portion of the electromagnetic spectrum does this frequency lie?
71. The ion CH_5^+ can form under very special high-energy conditions in the vapor phase in a mass spectrometer. Propose a hybridization for the carbon atom and predict the geometry.
72. Neither the VSEPR model nor the hybridization model is able to account for the experimental observation that the $\text{F}-\text{Ba}-\text{F}$ bond angle in gaseous BaF_2 is 108° rather than the predicted 180° . Suggest some possible explanations for this observation.

CONCEPTUAL PROBLEMS

73. How does each of the three major bonding theories (the Lewis model, valence bond theory, and molecular orbital theory) define a single chemical bond? A double bond? A triple bond? How are these definitions similar? How are they different?
74. The most stable forms of the nonmetals in groups 4A, 5A, and 6A of the first period are molecules with multiple bonds. Beginning with the second period, the most stable forms of the nonmetals of these groups are molecules without multiple bonds. Propose an explanation for this observation based on valence bond theory.

75. Consider the bond energies of three iodine halides:

• Bond	• Bond Energy
• Br—Cl	• 218 kJ/mol
• Br—Br	• 193 kJ/mol
• I—Br	• 175 kJ/mol

How might you use valence bond theory to help explain this trend?

QUESTIONS FOR GROUP WORK

Discuss these questions with the group and record your consensus answer.

76. How many atomic orbitals form a set of sp^3 hybrid orbitals? A set of sp^2 hybrid orbitals? A set of sp hybrid orbitals? What is the relationship between these numbers and the number of electron groups around the central atom?
77. Have each group member pick one of these hybridization schemes (sp , sp^2 , and sp^3) and describe it to the other group members. In the

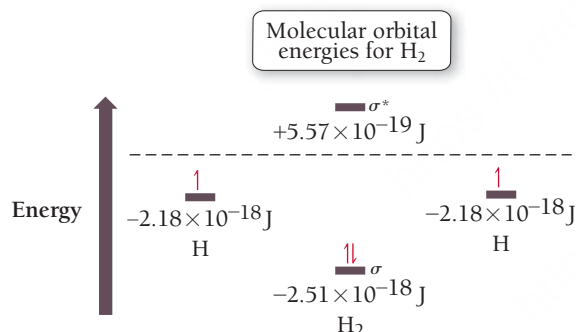
Active Classroom Learning

description, include a drawing of the orbitals in the hybridization scheme and indicate how to determine if that hybridization scheme is the correct one for a particular atom in a molecule.

78. Divide your group into two subgroups. Have one subgroup use molecular orbital theory to explain bonding in N_2^+ and the other in N_2^- . Then have the entire group describe how the bond strengths in these ions are different from those of the bonds in neutral N_2 .

DATA INTERPRETATION AND ANALYSIS

79. A molecular orbital calculation for H_2 results in the molecular orbital diagram shown here. The energy listed next to each orbital in the diagram corresponds to the energy of an electron in that orbital according to the calculation. Study the diagram and answer the questions that follow.



- What is the ionization energy of H in kJ/mol?
- Based on the calculation, what is the ionization energy of H_2 in kJ/mol?
- Based on the calculation, what is the bond energy for H_2 in kJ/mol? (*Hint: The bond energy is the difference between the energies of the two electrons when they are in H atoms and the energies of the two electrons when they are in H_2 .*)
- Look up the bond energy for H_2 in Table 5.3. How does the calculated bond energy compare to the experimentally measured bond energy? Calculate the percent difference between the calculated bond energy and the experimentally measured bond energy.

ANSWERS TO CONCEPTUAL CONNECTIONS

- Cc 6.1 (a) In the Lewis model, a covalent chemical bond is the sharing of electrons (represented by dots). (b) In valence bond theory, a covalent chemical bond is the overlap of half-filled atomic orbitals. (c) The answers are different because the Lewis model and valence bond theory are different models for chemical bonding. They both make useful and often similar predictions, but the assumptions of each model are different, and so are their respective descriptions of a chemical bond.
- Cc 6.2 According to valence bond theory, a double bond is actually composed of two different kinds of bonds, one σ and one π . The orbital overlap in the π bond is side to side between two p orbitals and consequently different from the end-to-end

overlap in a σ bond. Because the bonds are different types, the bond energy of the double bond is not just the bond energy of the single bond doubled.

- Cc 6.3 (a) Because carbon has two electron groups in CO_2 (the two double bonds), the geometry is linear and the hybridization is sp .


- Cc 6.4 In molecular orbital theory, atoms join together (or bond) when the electrons in the atoms can lower their energy by occupying the molecular orbitals of the resultant molecule. Unlike the Lewis model or valence bond theory, the chemical “bonds” in MO theory are not localized between atoms but spread throughout the entire molecule.

- 7.1** Climate Change and the Combustion of Fossil Fuels 287
- 7.2** Chemical and Physical Change 289
- 7.3** Writing and Balancing Chemical Equations 290
- 7.4** Reaction Stoichiometry: How Much Carbon Dioxide? 295

- 7.5** Stoichiometric Relationships: Limiting Reactant, Theoretical Yield, Percent Yield, and Reactant in Excess 299

- 7.6** Three Examples of Chemical Reactions: Combustion, Alkali Metals, and Halogens 306

Key Learning Outcomes 310



The molecular models on this balance represent the reactants and products in the combustion of octane, a component of petroleum. One of the products, carbon dioxide, is the main greenhouse gas implicated in global climate change.

CHAPTER

7

Chemical Reactions and Chemical Quantities

WE HAVE SPENT THE LAST THREE CHAPTERS examining compounds and bonding within compounds. We now turn to the process that can create or transform compounds: *chemical reactions*. As we have seen, matter is composed of particles. Those particles can be atoms, ions, or molecules. The particles that compose matter are in constant motion, vibrating, jostling, and colliding with one another. In some cases, a collision between particles leads to a remarkable change. The electrons in one particle are drawn to the nuclei in the other particle and vice versa. If the conditions are right, a chemical reaction occurs and the particles are transformed. In this chapter, we examine chemical reactions. We learn how to write equations to represent reactions, and we look closely at chemical *stoichiometry*—the numerical relationships between the relative amounts of particles in a chemical reaction.

“I feel sorry for people who don’t understand anything about chemistry. They are missing an important source of happiness.”

—Linus Pauling (1901–1994)

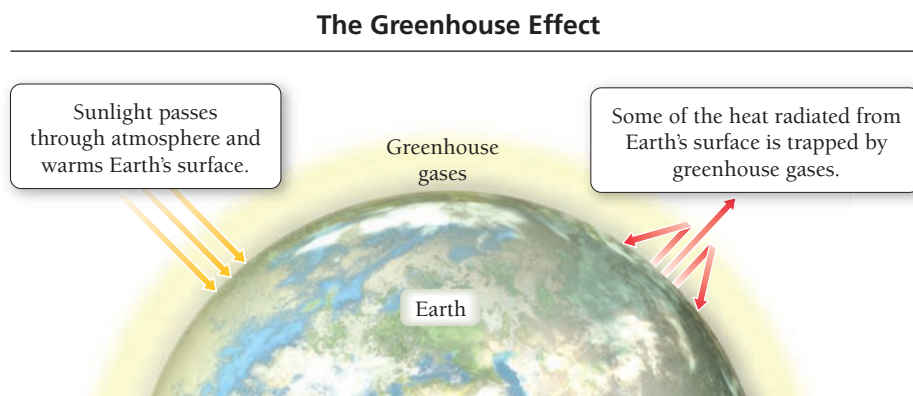
7.1 Climate Change and the Combustion of Fossil Fuels

The temperature outside my office today is a cool 48°F, lower than normal for this time of year on the California coast. However, today’s “chill” pales in comparison with how cold it would be without the presence of *greenhouse gases* in the atmosphere. These gases act like the glass of a greenhouse, allowing sunlight to enter the atmosphere and warm Earth’s surface, but preventing some of the heat generated by the sunlight from escaping, as shown in **Figure 7.1** ▶ on the next page. The balance between incoming and outgoing energy from the sun determines Earth’s average temperature.

If the greenhouse gases in the atmosphere were not present, more heat energy would escape, and Earth’s average temperature would be about 60°F colder. The temperature outside of my office today would be below 0°F, and even the sunniest U.S. cities would most likely be covered with snow. However, if the concentration of greenhouse gases in the atmosphere were to increase, Earth’s average temperature would rise.

► **FIGURE 7.1 The Greenhouse Effect**

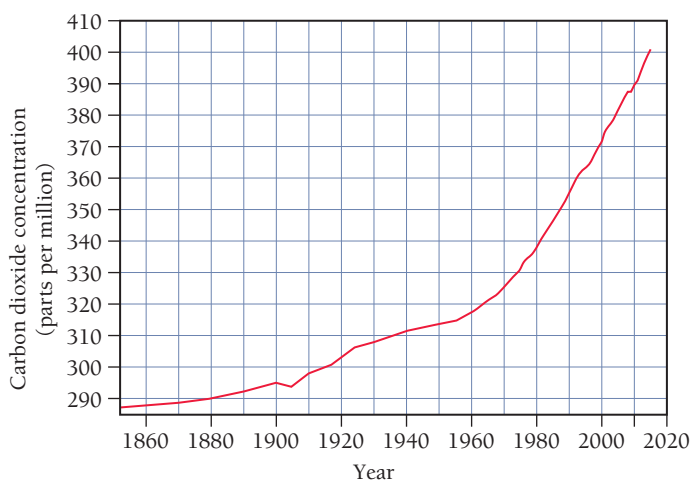
Greenhouse gases in the atmosphere act as a one-way filter. They allow visible light to pass through and warm Earth's surface, but they prevent heat energy from radiating back out into space.



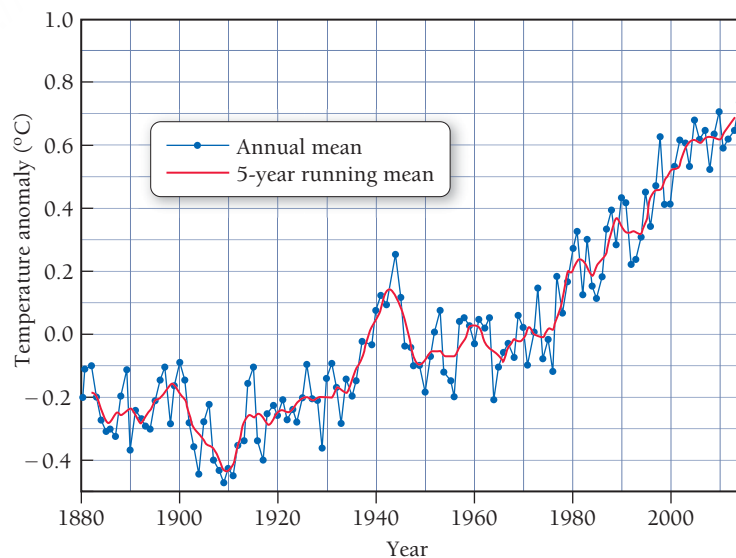
In recent years scientists have become increasingly concerned because the quantity of atmospheric carbon dioxide (CO_2)—Earth's most significant greenhouse gas—is rising. More CO_2 enhances the atmosphere's ability to hold heat and is believed to lead to *global warming*, an increase in Earth's average temperature. Since 1860, atmospheric CO_2 levels have risen by 38% (**Figure 7.2 ▼**), and Earth's average temperature has risen by 0.8°C (about 1.4°F), as shown in **Figure 7.3 ▼**.

Most climate scientists assert that the primary cause of rising atmospheric CO_2 concentration is the burning of fossil fuels (natural gas, petroleum, and coal), which provide about 82% of our society's energy. The burning of fossil fuels is a *chemical reaction*, the subject of this chapter. Some people, however, counter that fossil fuel combustion does not significantly contribute to global warming and climate change. They argue that the amount of carbon dioxide emitted into the atmosphere by natural sources, such as volcanic eruptions, far exceeds that from fossil fuel combustion.

Which group is right? We can judge the validity of the naysayers' argument by examining the combustion reaction that forms carbon dioxide. Governments keep records on the amount of fossil fuel that is burned. By understanding the combustion reaction by which fossil fuels burn, we can calculate the amount of carbon dioxide that is formed. We can then compare that amount to the amount released by volcanic eruptions. In this chapter, we first look at chemical changes in general, and then turn to examine this debate.

Atmospheric Carbon Dioxide

▲ **FIGURE 7.2 Carbon Dioxide Concentrations in the Atmosphere** The rise in carbon dioxide levels is due largely to fossil fuel combustion.

Global Temperature

▲ **FIGURE 7.3 Global Temperature** Average temperatures worldwide have risen by about 0.8°C since 1880.

7.2 Chemical and Physical Change

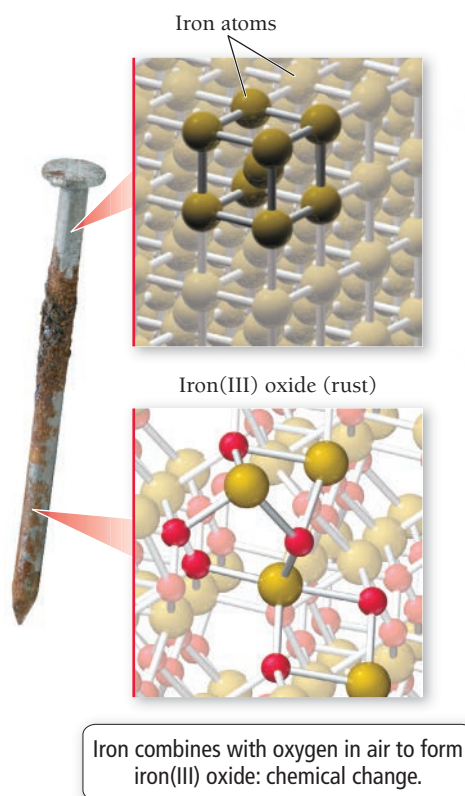
The process by which a fossil fuel such as gasoline burns in the presence of oxygen is a *chemical change*. In a **chemical change**, atoms rearrange and the original substances (in this case gasoline) transform into different substances (in this case water and carbon dioxide). Other chemical changes include the rusting of iron (**Figure 7.4 ▼**), the burning of sugar in a hot pan, and the transformation of oxygen and carbon dioxide into glucose that occurs within plants during photosynthesis.

Matter can also undergo **physical changes**, which—in contrast to chemical changes—do not change its composition. The atoms or molecules that compose a substance *do not change* their identity during a physical change. For example, when water boils, it changes from the liquid state to the gas state, but the molecules composing the water remain intact (**Figure 7.5 ▼**).

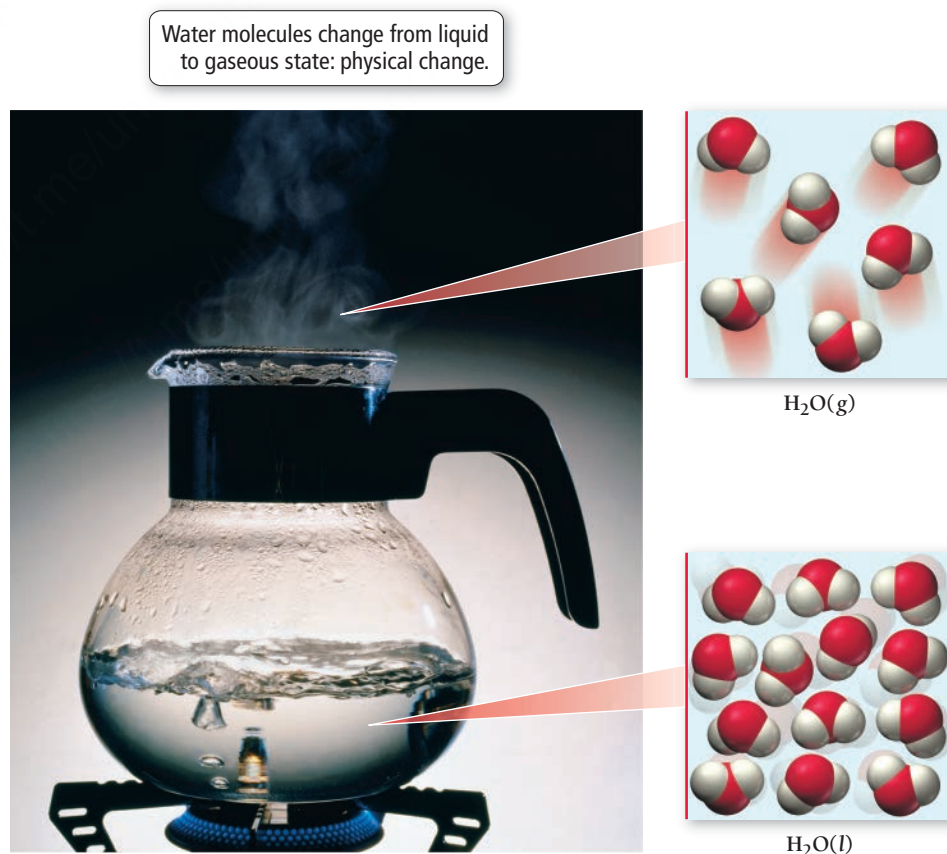
Chemical and physical changes are manifestations of chemical and physical properties. A **chemical property** is a property that a substance displays only by changing its composition via a chemical change, while a **physical property** is a property that a substance displays without changing its composition. The flammability of gasoline is a chemical property—gasoline changes its composition when it burns, turning into completely new substances (primarily carbon dioxide and water as we have already seen). The smell of gasoline, by contrast, is a physical property—gasoline does not change its composition when it exhibits its odor. Chemical properties include corrosiveness, flammability, acidity, toxicity, and other such characteristics. Physical properties include odor, taste, color, appearance, melting point, boiling point, and density.

The differences between chemical and physical changes are not always apparent. Only chemical examination can confirm whether any particular change is chemical or physical. In many cases, however, we can identify chemical and physical changes based on what we know about the changes.

A physical change results in a different form of the same substance, while a chemical change results in a completely different substance.



▲ FIGURE 7.4 Rusting, a Chemical Change When iron rusts, the iron atoms exchange electrons with oxygen atoms and combine with them to form a different chemical substance, the compound iron(III) oxide. Rusting is therefore a chemical change.



▲ FIGURE 7.5 Boiling, a Physical Change When water boils, it turns into a gas but does not alter its chemical identity—the water molecules are the same in both the liquid and gaseous states. Boiling is thus a physical change, and the boiling point of water is a physical property.

Chemical changes are often evidenced by temperature or color changes. Changes in the state of matter, such as melting or boiling, or changes in the physical condition of matter, such as those that result from cutting or crushing, are typically physical changes.



7.1 Cc

Conceptual
Connection

Chemical Change

Which change is a chemical change?

- (a) the evaporation of rubbing alcohol
- (b) the burning of lamp oil
- (c) the forming of frost on a cold night

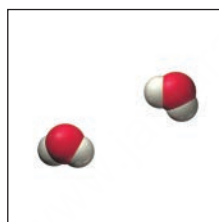


7.2 Cc

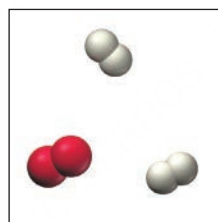
Conceptual
Connection

Physical Change

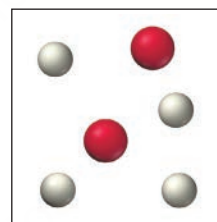
The diagram on the right represents liquid water molecules in a pan. Which of the three diagrams below best represents the water molecules after they have been vaporized by boiling?



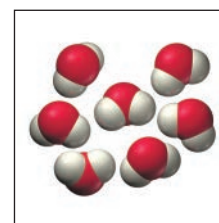
(a)



(b)



(c)

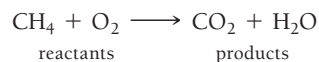


KEY CONCEPT VIDEO
Writing and Balancing
Chemical Equations

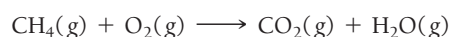
7.3 Writing and Balancing Chemical Equations

Chemical changes occur via **chemical reactions**. For example, fossil fuels form carbon dioxide via combustion reactions. A *combustion reaction*, which we discuss in more detail in Section 7.6, is a particular type of chemical reaction. In this type of reaction, a substance combines with oxygen to form one or more oxygen-containing compounds. Combustion reactions also emit heat. The heat produced in fossil fuel combustion reactions supplies much of our society's energy needs. For example, the heat from the combustion of gasoline expands the gaseous combustion products in a car engine's cylinders, which push the pistons and propel the car. We use the heat released by the combustion of *natural gas* to cook food and to heat our homes.

We represent a chemical reaction with a **chemical equation**. For example, we represent the combustion of natural gas with the equation:



The substances on the left side of the equation are the **reactants**, and the substances on the right side are the **products**. We often specify the state of each reactant or product in parentheses next to the formula as shown here:

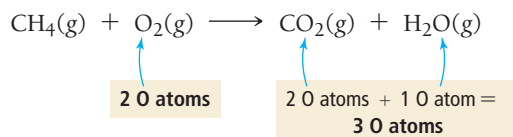


The (g) indicates that these substances are gases in the reaction. Table 7.1 summarizes the common states of reactants and products and their symbols used in chemical equations.

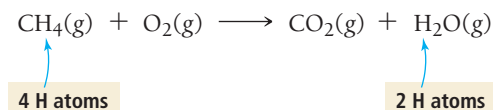
TABLE 7.1 States of Reactants and Products in Chemical Equations

Abbreviation	State
(g)	Gas
(l)	Liquid
(s)	Solid
(aq)	Aqueous (water solution)

The equation just presented for the combustion of natural gas is not complete, however.

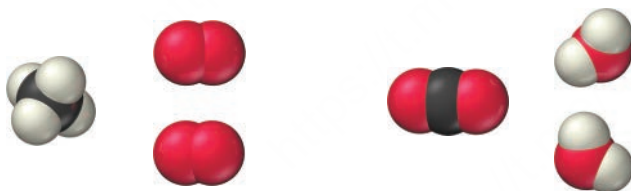


The left side of the equation has two oxygen atoms, while the right side has three. The reaction as written violates the law of conservation of mass because it makes it seem as if an oxygen atom formed out of nothing. Notice also that the left side has four hydrogen atoms, while the right side has only two. Two hydrogen atoms appear to have vanished, again violating mass conservation.

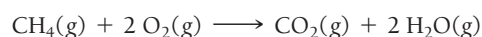


To correct these problems—that is, to write an equation that more closely represents *what actually happens*—we must *balance* the equation. We change the coefficients (the numbers *in front of* the chemical formulas), not the subscripts (the numbers *within* the chemical formulas), to ensure that the number of each type of atom on the left side of the equation is equal to the number on the right side. New atoms do not form during a reaction, nor do atoms vanish—matter must be conserved.

When we add coefficients to the reactants and products to balance an equation, we change the number of molecules in the equation but not the *kind* of molecules. To balance the equation for the combustion of methane, we put the coefficient 2 before O_2 in the reactants, and the coefficient 2 before H_2O in the products.



The equation is now balanced because the numbers of each type of atom on either side of the equation are equal. The balanced equation tells us that one CH_4 molecule reacts with two O_2 molecules to form one CO_2 molecule and two H_2O molecules. We can verify that the equation is balanced by summing the number of each type of atom on each side of the equation.



Reactants	Products
1 C atom (1 \times $\underline{\text{CH}_4}$)	1 C atom (1 \times $\underline{\text{CO}_2}$)
4 H atoms (1 \times $\underline{\text{CH}_4}$)	4 H atoms (2 \times $\underline{\text{H}_2\text{O}}$)
4 O atoms (2 \times $\underline{\text{O}_2}$)	4 O atoms (1 \times $\underline{\text{CO}_2}$ + 2 \times $\underline{\text{H}_2\text{O}}$)

The number of each type of atom on both sides of the equation is equal—we have balanced the equation.

We cannot change the subscripts when balancing a chemical equation because changing the subscripts changes the substances themselves, while changing the coefficients changes the numbers of molecules of the substances. For example, 2 H_2O is two water molecules, but H_2O_2 is hydrogen peroxide, a drastically different compound.

We can balance many chemical equations simply by trial and error. However, some guidelines are useful. For example, balancing the atoms in the most complex substances first and the atoms in the simplest substances (such as pure elements) last often makes the process shorter. The following illustrations of how to balance chemical equations are presented in a three-column format. The general guidelines are shown on the left, with two examples of how to apply them on the right. This procedure is meant only as a flexible guide, not a rigid set of steps.

Interactive Worked
Example Video 7.2



EXAMPLE 7.1

EXAMPLE 7.2

PROCEDURE FOR Balancing Chemical Equations

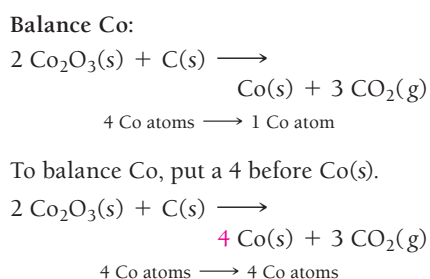
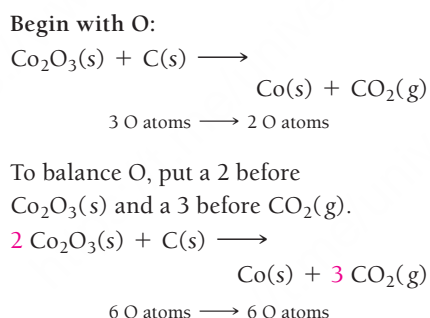
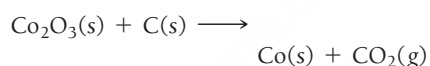
1. Write a skeletal (unbalanced) equation by writing chemical formulas for each of the reactants and products. Review Sections 4.6 and 4.8 for nomenclature rules. (If a skeletal equation is provided, proceed to Step 2.)

2. Balance atoms that occur in more complex substances first. Always balance atoms in compounds before atoms in pure elements.

3. Balance atoms that occur as free elements on either side of the equation last. Always balance free elements by adjusting the coefficient on the free element.

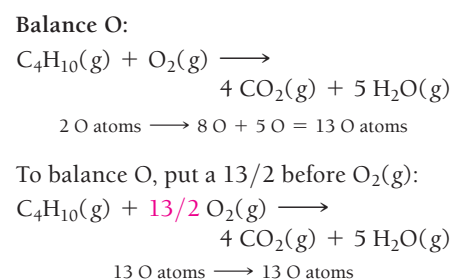
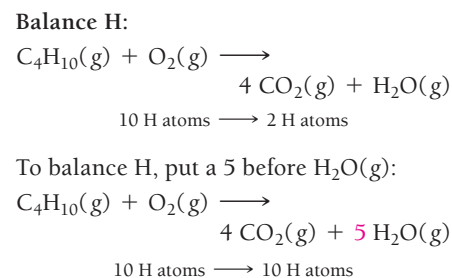
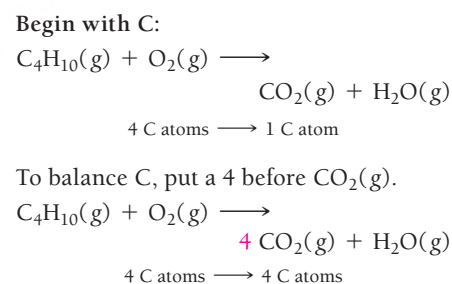
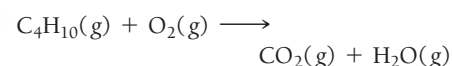
Balancing Chemical Equations

Write a balanced equation for the reaction between solid cobalt(III) oxide and solid carbon that produces solid cobalt and carbon dioxide gas.



Balancing Chemical Equations

Write a balanced equation for the combustion of gaseous butane (C_4H_{10}), a fuel used in portable stoves and grills, in which it combines with gaseous oxygen to form gaseous carbon dioxide and gaseous water.



	<p>Balance C:</p> $2 \text{Co}_2\text{O}_3(\text{s}) + \text{C}(\text{s}) \longrightarrow 4 \text{Co}(\text{s}) + 3 \text{CO}_2(\text{g})$ <p>1 C atom \longrightarrow 3 C atoms</p> <p>To balance C, put a 3 before C(s).</p> $2 \text{Co}_2\text{O}_3(\text{s}) + 3 \text{C}(\text{s}) \longrightarrow 4 \text{Co}(\text{s}) + 3 \text{CO}_2(\text{g})$																	
4. If the balanced equation contains coefficient fractions, clear these by multiplying the entire equation by the denominator of the fraction.	This step is not necessary in this example. Proceed to Step 5.	$[\text{C}_4\text{H}_{10}(\text{g}) + 13/2 \text{O}_2(\text{g}) \longrightarrow 4 \text{CO}_2(\text{g}) + 5 \text{H}_2\text{O}(\text{g})] \times 2$ $2 \text{C}_4\text{H}_{10}(\text{g}) + 13 \text{O}_2(\text{g}) \longrightarrow 8 \text{CO}_2(\text{g}) + 10 \text{H}_2\text{O}(\text{g})$																
5. Check to make certain the equation is balanced by summing the total number of each type of atom on both sides of the equation.	$2 \text{Co}_2\text{O}_3(\text{s}) + 3 \text{C}(\text{s}) \longrightarrow 4 \text{Co}(\text{s}) + 3 \text{CO}_2(\text{g})$ <table><thead><tr><th>Left</th><th>Right</th></tr></thead><tbody><tr><td>4 Co atoms</td><td>4 Co atoms</td></tr><tr><td>6 O atoms</td><td>6 O atoms</td></tr><tr><td>3 C atoms</td><td>3 C atoms</td></tr></tbody></table> <p>The equation is balanced.</p>	Left	Right	4 Co atoms	4 Co atoms	6 O atoms	6 O atoms	3 C atoms	3 C atoms	$2 \text{C}_4\text{H}_{10}(\text{g}) + 13 \text{O}_2(\text{g}) \longrightarrow 8 \text{CO}_2(\text{g}) + 10 \text{H}_2\text{O}(\text{g})$ <table><thead><tr><th>Left</th><th>Right</th></tr></thead><tbody><tr><td>8 C atoms</td><td>8 C atoms</td></tr><tr><td>20 H atoms</td><td>20 H atoms</td></tr><tr><td>26 O atoms</td><td>26 O atoms</td></tr></tbody></table> <p>The equation is balanced.</p>	Left	Right	8 C atoms	8 C atoms	20 H atoms	20 H atoms	26 O atoms	26 O atoms
Left	Right																	
4 Co atoms	4 Co atoms																	
6 O atoms	6 O atoms																	
3 C atoms	3 C atoms																	
Left	Right																	
8 C atoms	8 C atoms																	
20 H atoms	20 H atoms																	
26 O atoms	26 O atoms																	
	<p>FOR PRACTICE 7.1</p> <p>Write a balanced equation for the reaction between solid silicon dioxide and solid carbon that produces solid silicon carbide (SiC) and carbon monoxide gas.</p>	<p>FOR PRACTICE 7.2</p> <p>Write a balanced equation for the combustion of gaseous ethane (C₂H₆), a minority component of natural gas, in which it combines with gaseous oxygen to form gaseous carbon dioxide and gaseous water.</p>																

Balanced Chemical Equations

Which quantity or quantities must always be the same on both sides of a chemical equation?

- the number of atoms of each kind
- the number of molecules of each kind
- the number of moles of each kind of molecule
- the sum of the masses of all substances involved

7.3
Cc

Conceptual
Connection



EXAMPLE 7.3

Balancing Chemical Equations Containing Ionic Compounds with Polyatomic Ions

Write a balanced equation for the reaction between aqueous strontium chloride and aqueous lithium phosphate to form solid strontium phosphate and aqueous lithium chloride.

SOLUTION

1. Write a skeletal equation by writing chemical formulas for each of the reactants and products. Review Sections 4.6 and 4.8 for naming rules. (If a skeletal equation is provided, proceed to Step 2.)	$\text{SrCl}_2(aq) + \text{Li}_3\text{PO}_4(aq) \longrightarrow \text{Sr}_3(\text{PO}_4)_2(s) + \text{LiCl}(aq)$										
2. Balance metal ions (cations) first. If a polyatomic cation exists on both sides of the equation, balance it as a unit.	<p>Begin with Sr^{2+}:</p> $\text{SrCl}_2(aq) + \text{Li}_3\text{PO}_4(aq) \longrightarrow \text{Sr}_3(\text{PO}_4)_2(s) + \text{LiCl}(aq)$ <p>1 Sr^{2+} ion \longrightarrow 3 Sr^{2+} ions</p> <p>To balance Sr^{2+}, put a 3 before $\text{SrCl}_2(aq)$.</p> $3\text{SrCl}_2(aq) + \text{Li}_3\text{PO}_4(aq) \longrightarrow \text{Sr}_3(\text{PO}_4)_2(s) + \text{LiCl}(aq)$ <p>3 Sr^{2+} ions \longrightarrow 3 Sr^{2+} ions</p> <p>Balance Li^+:</p> $3\text{SrCl}_2(aq) + \text{Li}_3\text{PO}_4(aq) \longrightarrow \text{Sr}_3(\text{PO}_4)_2(s) + \text{LiCl}(aq)$ <p>3 Li^+ ions \longrightarrow 1 Li^+ ion</p> <p>To balance Li^+, put a 3 before $\text{LiCl}(aq)$.</p> $3\text{SrCl}_2(aq) + \text{Li}_3\text{PO}_4(aq) \longrightarrow \text{Sr}_3(\text{PO}_4)_2(s) + 3\text{LiCl}(aq)$ <p>3 Li^+ ions \longrightarrow 3 Li^+ ions</p>										
3. Balance nonmetal ions (anions) second. If a polyatomic anion exists on both sides of the equation, balance it as a unit.	<p>Balance PO_4^{3-}:</p> $3\text{SrCl}_2(aq) + \text{Li}_3\text{PO}_4(aq) \longrightarrow \text{Sr}_3(\text{PO}_4)_2(s) + 3\text{LiCl}(aq)$ <p>1 PO_4^{3-} ion \longrightarrow 2 PO_4^{3-} ions</p> <p>To balance PO_4^{3-}, put a 2 before $\text{Li}_3\text{PO}_4(aq)$.</p> $3\text{SrCl}_2(aq) + 2\text{Li}_3\text{PO}_4(aq) \longrightarrow \text{Sr}_3(\text{PO}_4)_2(s) + 3\text{LiCl}(aq)$ <p>2 PO_4^{3-} ions \longrightarrow 2 PO_4^{3-} ions</p> <p>Balance Cl^-:</p> $3\text{SrCl}_2(aq) + 2\text{Li}_3\text{PO}_4(aq) \longrightarrow \text{Sr}_3(\text{PO}_4)_2(s) + 3\text{LiCl}(aq)$ <p>6 Cl^- ions \longrightarrow 1 Cl^- ion</p> <p>To balance Cl^-, replace the 3 before $\text{LiCl}(aq)$ with a 6. This also corrects the balance for Li^+, which was thrown off in the previous step.</p> $3\text{SrCl}_2(aq) + 2\text{Li}_3\text{PO}_4(aq) \longrightarrow \text{Sr}_3(\text{PO}_4)_2(s) + 6\text{LiCl}(aq)$ <p>6 Cl^- ions \longrightarrow 6 Cl^- ions</p>										
4. Check to make certain the equation is balanced by summing the total number of each type of ion on both sides of the equation.	$3\text{SrCl}_2(aq) + 2\text{Li}_3\text{PO}_4(aq) \longrightarrow \text{Sr}_3(\text{PO}_4)_2(s) + 6\text{LiCl}(aq)$ <table><thead><tr><th>Left</th><th>Right</th></tr></thead><tbody><tr><td>3 Sr^{2+} ions</td><td>3 Sr^{2+} ions</td></tr><tr><td>6 Li^+ ions</td><td>6 Li^+ ions</td></tr><tr><td>2 PO_4^{3-} ions</td><td>2 PO_4^{3-} ions</td></tr><tr><td>6 Cl^- ions</td><td>6 Cl^- ions</td></tr></tbody></table> <p>The equation is balanced.</p>	Left	Right	3 Sr^{2+} ions	3 Sr^{2+} ions	6 Li^+ ions	6 Li^+ ions	2 PO_4^{3-} ions	2 PO_4^{3-} ions	6 Cl^- ions	6 Cl^- ions
Left	Right										
3 Sr^{2+} ions	3 Sr^{2+} ions										
6 Li^+ ions	6 Li^+ ions										
2 PO_4^{3-} ions	2 PO_4^{3-} ions										
6 Cl^- ions	6 Cl^- ions										

FOR PRACTICE 7.3

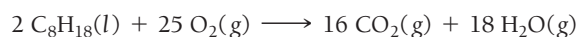
Write a balanced equation for the reaction between aqueous lead(II) nitrate and aqueous potassium chloride to form solid lead(II) chloride and aqueous potassium nitrate.

7.4 Reaction Stoichiometry: How Much Carbon Dioxide?

KEY CONCEPT VIDEO
Reaction Stoichiometry



Now that we have examined how to write balanced chemical equations, we can return to the question posed in Section 7.1: How much carbon dioxide is produced from the world's combustion of fossil fuels (and how does that compare to the amount produced by volcanoes)? The balanced chemical equations for fossil fuel combustion reactions provide the relationship between the amount of fossil fuel burned and the amount of carbon dioxide emitted. In this discussion, we use octane (a component of gasoline) as a representative fossil fuel. The balanced equation for the combustion of octane is:



The balanced equation shows that 16 CO_2 molecules are produced for every 2 molecules of octane burned. We can extend this numerical relationship between molecules to the amounts in moles as follows:

The coefficients in a chemical equation specify the relative amounts in moles of each of the substances involved in the reaction.

In other words, from the equation, we know that 16 *moles* of CO_2 are produced for every 2 *moles* of octane burned. The numerical relationships between chemical amounts in a balanced chemical equation are called reaction **stoichiometry**. Stoichiometry allows us to predict the amounts of products that will form in a chemical reaction based on the amounts of reactants that react. Stoichiometry also allows us to determine the amount of reactants necessary to form a given amount of product. These calculations are central to chemistry, allowing chemists to plan and carry out chemical reactions to obtain products in the desired quantities.

Stoichiometry is pronounced
stoy-kee-AHM-e-tree.

Making Pizza: The Relationships among Ingredients

The concepts of stoichiometry are similar to those in a cooking recipe. Calculating the amount of carbon dioxide produced by the combustion of a given amount of a fossil fuel is analogous to calculating the number of pizzas that can be made from a given amount of cheese. For example, suppose we use the following pizza recipe:



The recipe contains the numerical relationships between the pizza ingredients. It says that if we have 2 cups of cheese—and enough of everything else—we can make 1 pizza. We can write this relationship as a ratio between the cheese and the pizza:

$$2 \text{ cups cheese} : 1 \text{ pizza}$$

What if we have 6 cups of cheese? Assuming that we have enough of everything else, we can use this ratio as a conversion factor to calculate the number of pizzas:

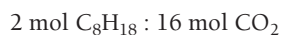
$$6 \text{ cups cheese} \times \frac{1 \text{ pizza}}{2 \text{ cups cheese}} = 3 \text{ pizzas}$$

Six cups of cheese are sufficient to make 3 pizzas. The pizza recipe contains numerical ratios between other ingredients as well, including the following:

$$\begin{aligned} 1 \text{ crust} &: 1 \text{ pizza} \\ 5 \text{ ounces tomato sauce} &: 1 \text{ pizza} \end{aligned}$$

Making Molecules: Mole-to-Mole Conversions

In a balanced chemical equation, we have a “recipe” for how reactants combine to form products. From our balanced equation for the combustion of octane, for example, we can write the following stoichiometric ratio:



We can use this ratio to determine how many moles of CO_2 form when a given number of moles of C_8H_{18} burns. Suppose that we burn 22.0 moles of C_8H_{18} ; how many moles of CO_2 form? We use the ratio from the balanced chemical equation in the same way that we used the ratio from the pizza recipe. The ratio acts as a conversion factor between the amount in moles of the reactant (C_8H_{18}) and the amount in moles of the product (CO_2).

$$22.0 \text{ mol } \text{C}_8\text{H}_{18} \times \frac{16 \text{ mol } \text{CO}_2}{2 \text{ mol } \text{C}_8\text{H}_{18}} = 176 \text{ mol } \text{CO}_2$$

The combustion of 22.0 moles of C_8H_{18} adds 176 moles of CO_2 to the atmosphere.

Making Molecules: Mass-to-Mass Conversions

According to the U.S. Department of Energy, the world burned 3.3×10^{10} barrels of petroleum in 2013, the equivalent of approximately 3.7×10^{15} g of gasoline. We can estimate the mass of CO_2 emitted into the atmosphere from burning this much gasoline using the combustion of 3.7×10^{15} g octane as the representative reaction. This calculation is similar to the one we just completed, except that we are now given the *mass* of octane instead of the *amount* of octane in moles. Consequently, we must first convert the mass (in grams) to the amount (in moles).

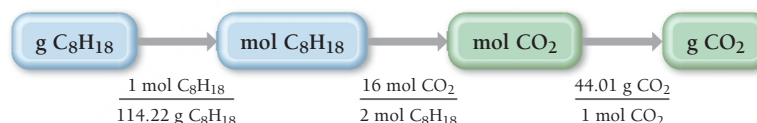
The general conceptual plan for calculations in which we are given the mass of a reactant or product in a chemical reaction and asked to find the mass of a different reactant or product takes this form:



where A and B are two different substances involved in the reaction. We use the molar mass of A to convert from the mass of A to the amount of A (in moles). We use the appropriate ratio from the balanced chemical equation to convert from the amount of A (in moles) to the amount of B (in moles). And finally, we use the molar mass of B to convert from the amount of B (in moles) to the mass of B.

To calculate the mass of CO_2 emitted upon the combustion of 3.7×10^{15} g of octane, we use the following conceptual plan:

Conceptual Plan



Relationships Used

$$\text{molar mass } \text{C}_8\text{H}_{18} = 114.22 \text{ g/mol}$$

$$2 \text{ mol } \text{C}_8\text{H}_{18} : 16 \text{ mol } \text{CO}_2 \text{ (from chemical equation)}$$

$$\text{molar mass } \text{CO}_2 = 44.01 \text{ g/mol}$$

Solution

We follow the conceptual plan to solve the problem, beginning with grams C_8H_{18} and canceling units to arrive at grams CO_2 .

$$3.7 \times 10^{15} \text{ g } \text{C}_8\text{H}_{18} \times \frac{1 \text{ mol } \text{C}_8\text{H}_{18}}{114.22 \text{ g } \text{C}_8\text{H}_{18}} \times \frac{16 \text{ mol } \text{CO}_2}{2 \text{ mol } \text{C}_8\text{H}_{18}} \times \frac{44.01 \text{ g } \text{CO}_2}{1 \text{ mol } \text{CO}_2} = 1.1 \times 10^{16} \text{ g } \text{CO}_2$$

The world's petroleum combustion produces 1.1×10^{16} g CO_2 (1.1×10^{13} kg) per year. In comparison, volcanoes produce about 2×10^{11} kg CO_2 per year. In other words, volcanoes emit only $\frac{2.0 \times 10^{11} \text{ kg}}{1.1 \times 10^{13} \text{ kg}} \times 100\% = 1.8\%$ as much CO_2 per year as petroleum combustion.* The argument that volcanoes emit more carbon dioxide than fossil fuel combustion is clearly erroneous. Examples 7.4 and 7.5 provide additional practice with stoichiometric calculations.

The percentage of CO_2 emitted by volcanoes relative to all fossil fuels is even less than 1.8% because the combustion of coal and natural gas also emits CO_2 .

EXAMPLE 7.4

Stoichiometry

Interactive
Worked Example
Video 7.4

PEARSON
eText
2.0

In photosynthesis, plants convert carbon dioxide and water into glucose ($\text{C}_6\text{H}_{12}\text{O}_6$) according to the reaction:



Suppose you determine that a particular plant consumes 37.8 g of CO_2 in one week. Assuming that there is more than enough water present to react with all of the CO_2 , what mass of glucose (in grams) can the plant synthesize from the CO_2 ?

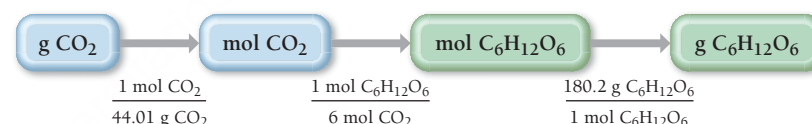
SORT The problem gives the mass of carbon dioxide and asks you to find the mass of glucose that the plant can produce.

GIVEN: 37.8 g CO_2

FIND: g $\text{C}_6\text{H}_{12}\text{O}_6$

STRATEGIZE The conceptual plan follows the general pattern of mass A \longrightarrow amount A (in moles) \longrightarrow amount B (in moles) \longrightarrow mass B. From the chemical equation, deduce the relationship between moles of carbon dioxide and moles of glucose. Use the molar masses to convert between grams and moles.

CONCEPTUAL PLAN



RELATIONSHIPS USED

molar mass $\text{CO}_2 = 44.01 \text{ g/mol}$

6 mol CO_2 : 1 mol $\text{C}_6\text{H}_{12}\text{O}_6$ (from chemical equation)

molar mass $\text{C}_6\text{H}_{12}\text{O}_6 = 180.2 \text{ g/mol}$

SOLVE Follow the conceptual plan to solve the problem. Begin with g CO_2 and use the conversion factors to arrive at g $\text{C}_6\text{H}_{12}\text{O}_6$.

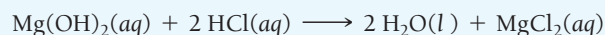
SOLUTION

$$37.8 \text{ g } \text{CO}_2 \times \frac{1 \text{ mol } \text{CO}_2}{44.01 \text{ g } \text{CO}_2} \times \frac{1 \text{ mol } \text{C}_6\text{H}_{12}\text{O}_6}{6 \text{ mol } \text{CO}_2} \times \frac{180.2 \text{ g } \text{C}_6\text{H}_{12}\text{O}_6}{1 \text{ mol } \text{C}_6\text{H}_{12}\text{O}_6} = 25.8 \text{ g } \text{C}_6\text{H}_{12}\text{O}_6$$

CHECK The units of the answer are correct. The magnitude of the answer (25.8 g) is less than the initial mass of CO_2 (37.8 g). This is reasonable because each carbon in CO_2 has two oxygen atoms associated with it, while in $\text{C}_6\text{H}_{12}\text{O}_6$ each carbon has only one oxygen atom associated with it and two hydrogen atoms, which are much lighter than oxygen. Therefore, the mass of glucose the plant produces should be less than the mass of carbon dioxide for this reaction.

FOR PRACTICE 7.4

Magnesium hydroxide, the active ingredient in milk of magnesia, neutralizes stomach acid, primarily HCl , according to the reaction:



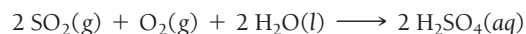
What mass of HCl , in grams, is neutralized by a dose of milk of magnesia containing 3.26 g $\text{Mg}(\text{OH})_2$?

*Gerlach, T. M., Present-day CO_2 emissions from volcanoes; *Eos, Transactions, American Geophysical Union*, Vol. 72, No. 23, June 4, 1991, pp. 249 and 254–255.

EXAMPLE 7.5

Stoichiometry

Sulfuric acid (H_2SO_4) is a component of acid rain that forms when SO_2 , a pollutant, reacts with oxygen and water according to the simplified reaction:



The generation of the electricity used by a medium-sized home produces about 25 kg of SO_2 per year. Assuming that there is more than enough O_2 and H_2O , what mass of H_2SO_4 , in kilograms, can form from this much SO_2 ?

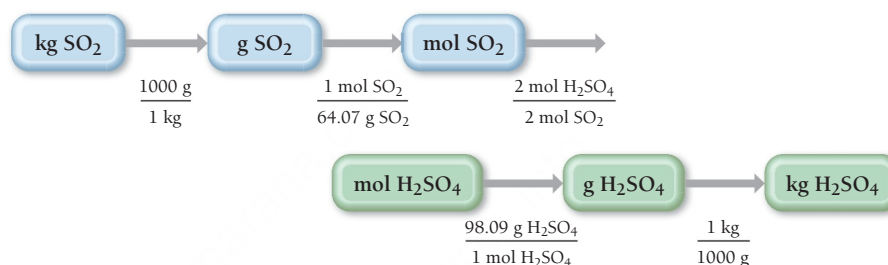
SORT The problem gives the mass of sulfur dioxide and asks you to find the mass of sulfuric acid.

GIVEN: 25 kg SO_2

FIND: kg H_2SO_4

STRATEGIZE The conceptual plan follows the standard format of mass \longrightarrow amount (in moles) \longrightarrow amount (in moles) \longrightarrow mass. Because the original quantity of SO_2 is given in kilograms, you must first convert to grams. You can deduce the relationship between moles of sulfur dioxide and moles of sulfuric acid from the balanced chemical equation. Because the final quantity is requested in kilograms, you convert to kilograms at the end.

CONCEPTUAL PLAN



RELATIONSHIPS USED

1 kg = 1000 g

molar mass SO_2 = 64.07 g/mol

2 mol SO_2 : 2 mol H_2SO_4 (from chemical equation)

molar mass H_2SO_4 = 98.09 g/mol

SOLVE Follow the conceptual plan to solve the problem. Begin with the given amount of SO_2 in kilograms and use the conversion factors to arrive at kg H_2SO_4 .

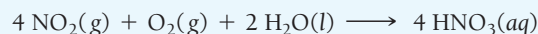
SOLUTION

$$25 \text{ kg SO}_2 \times \frac{1000 \text{ g}}{1 \text{ kg}} \times \frac{1 \text{ mol SO}_2}{64.07 \text{ g SO}_2} \times \frac{2 \text{ mol H}_2\text{SO}_4}{2 \text{ mol SO}_2} \times \frac{98.09 \text{ g H}_2\text{SO}_4}{1 \text{ mol H}_2\text{SO}_4} \times \frac{1 \text{ kg}}{1000 \text{ g}} = 38 \text{ kg H}_2\text{SO}_4$$


CHECK The units of the final answer are correct. The magnitude of the final answer (38 kg H_2SO_4) is larger than the given amount of SO_2 (25 kg). This is reasonable because in the reaction each SO_2 molecule “gains weight” by reacting with O_2 and H_2O .

FOR PRACTICE 7.5

Another component of acid rain is nitric acid, which forms when NO_2 , also a pollutant, reacts with oxygen and water according to the simplified equation:



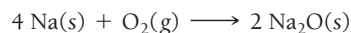
The generation of the electricity used by a medium-sized home produces about 16 kg of NO_2 per year. Assuming that there is adequate O_2 and H_2O , what mass of HNO_3 , in kilograms, can form from this amount of NO_2 pollutant?



Conceptual
Connection

Stoichiometry

Under certain conditions, sodium reacts with oxygen to form sodium oxide according to the reaction:



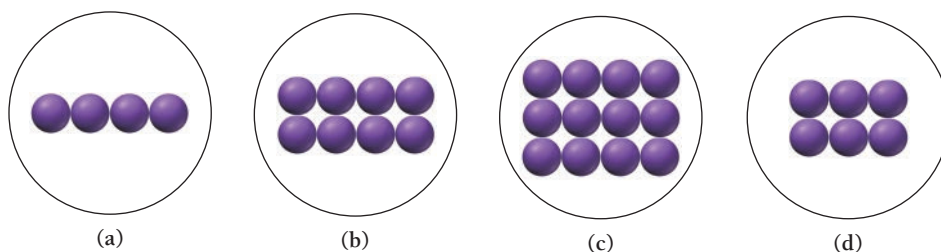
A flask contains the amount of oxygen represented by the diagram on the right.



—Continued on the next page

Continued from the previous page—

Which image below best represents the amount of sodium required to completely react with all of the oxygen in the flask according to the equation?



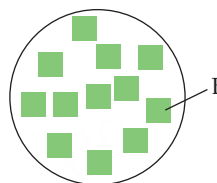
Stoichiometry II

7.5
Cc

Conceptual
Connection

PEARSON
eText
2.0

Consider the generic chemical equation $A + 3B \longrightarrow 2C$. Let circles represent molecules of A, squares represent molecules of B, and triangles represent molecules of C. The diagram on the right represents the amount of B available for reaction. Draw similar diagrams showing: (a) the amount of A necessary to completely react with B; and (b) the amount of C that forms if B completely reacts.



7.5 Stoichiometric Relationships: Limiting Reactant, Theoretical Yield, Percent Yield, and Reactant in Excess

KEY CONCEPT VIDEO
Limiting Reactant,
Theoretical Yield, and
Percent Yield

PEARSON
eText
2.0

When we carry out a chemical reaction, we combine the reactants in a container and allow the reaction to occur. Because of the stoichiometric relationships we discussed in Section 7.4, the quantities of each reactant present (along with other factors) determine how much product the reaction produces. In this section, we look at these relationships, including the concepts of *limiting reactant*, *theoretical yield*, *percent yield*, and *reactant in excess*.

Limiting Reactant and Yield

We return to our pizza analogy to understand *limiting reactant*, *theoretical yield*, and *percent yield*. Recall our pizza recipe from Section 7.4:



Suppose that we have 4 crusts, 10 cups of cheese, and 15 ounces of tomato sauce. How many pizzas can we make?

We have enough crusts to make:

$$4 \text{ crusts} \times \frac{1 \text{ pizza}}{1 \text{ crust}} = 4 \text{ pizzas}$$

We have enough cheese to make:

$$10 \text{ cups cheese} \times \frac{1 \text{ pizza}}{2 \text{ cups cheese}} = 5 \text{ pizzas}$$

We have enough tomato sauce to make:

$$15 \text{ ounces tomato sauce} \times \frac{1 \text{ pizza}}{5 \text{ ounces tomato sauce}} = 3 \text{ pizzas}$$

Limiting reactant

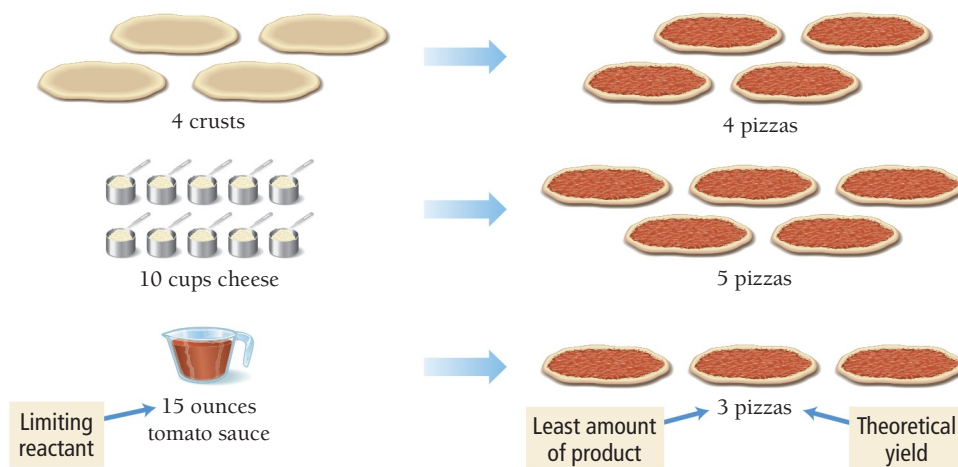
Smallest number of pizzas

We have enough crusts for 4 pizzas, enough cheese for 5 pizzas, but enough tomato sauce for only 3 pizzas. Consequently, unless we get more ingredients, we can make only 3 pizzas. The tomato sauce *limits* how many pizzas we can make. If the pizza recipe were a chemical reaction, the tomato sauce would be the **limiting reactant**—the reactant that limits the amount of product in a chemical reaction. Notice that the limiting reactant is the reactant that makes *the least amount of product*. The reactants that

The term *limiting reagent* is sometimes used in place of *limiting reactant*.

do not limit the amount of product—such as the crusts and the cheese in this example—are said to be *in excess*. If this were a chemical reaction, 3 pizzas would be the **theoretical yield**—the amount of product that can be made in a chemical reaction based on the amount of limiting reactant.

► The ingredient that makes the least amount of pizza determines how many pizzas we can make.



We can carry this analogy one step further. Suppose we go on to cook our pizzas and accidentally burn one of them. Even though we theoretically have enough ingredients for 3 pizzas, we end up with only 2. If this were a chemical reaction, the 2 pizzas would be our **actual yield**, the amount of product actually produced by a chemical reaction. The actual yield is always equal to or less than the theoretical yield because a small amount of product is usually lost to other reactions or does not form during a reaction.

With this information, we can calculate our **percent yield**, the percentage of the theoretical yield that was actually attained, as the ratio of the actual yield to the theoretical yield:

$$\% \text{ yield} = \frac{\text{Actual yield}}{\text{Theoretical yield}} \times 100\% = 67\%$$

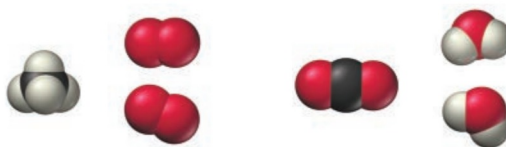
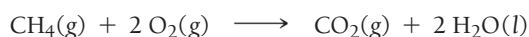
The calculation is shown as $\frac{2 \text{ pizzas}}{3 \text{ pizzas}} \times 100\% = 67\%$, with arrows pointing from 'Actual yield' to the numerator and 'Theoretical yield' to the denominator.

Since one of our pizzas burned, we obtained only 67% of our theoretical yield.

Summarizing Limiting Reactant and Yield:

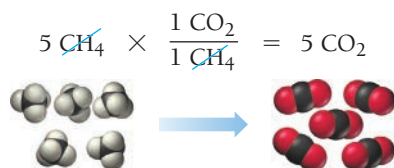
- The **limiting reactant** (or **limiting reagent**) is the reactant that is completely consumed in a chemical reaction and limits the amount of product.
- The **reactant in excess** is any reactant that occurs in a quantity greater than is required to completely react with the limiting reactant.
- The **theoretical yield** is the amount of product that can be made in a chemical reaction based on the amount of limiting reactant.
- The **actual yield** is the amount of product actually produced by a chemical reaction.
- The **percent yield** is $\frac{\text{actual yield}}{\text{theoretical yield}} \times 100\%$.

We can apply these concepts to a chemical reaction. Recall from Section 7.3 our balanced equation for the combustion of methane:

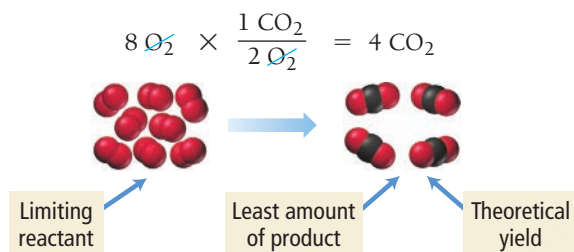


If we start out with 5 CH₄ molecules and 8 O₂ molecules, what is our limiting reactant? What is our theoretical yield of carbon dioxide molecules?

First, we calculate the number of CO₂ molecules that can be made from 5 CH₄ molecules:

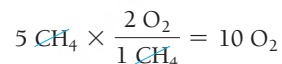


We then calculate the number of CO₂ molecules that can be made from 8 O₂ molecules:



We have enough CH₄ to make 5 CO₂ molecules and enough O₂ to make 4 CO₂ molecules. Therefore, O₂ is the limiting reactant, and 4 CO₂ molecules is the theoretical yield. The CH₄ is in excess.

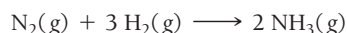
An alternative way to calculate the limiting reactant (which we mention here but do not use in this book) is to pick any reactant and determine how much of the *other reactant* is necessary to completely react with it. For the reaction we just examined, we have 5 CH₄ molecules and 8 O₂ molecules. Let's pick the 5 CH₄ molecules and determine how many O₂ molecules are necessary to completely react with them:



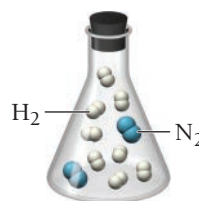
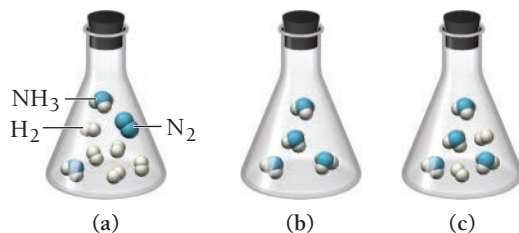
Since we need 10 O₂ molecules to completely react with the 5 CH₄ molecules, and since we have only 8 O₂ molecules, we know that the O₂ is the limiting reactant. We can apply the same method by comparing the amounts of reactants in moles.

Limiting Reactant and Theoretical Yield

Nitrogen and hydrogen gas react to form ammonia according to the reaction:



If a flask contains a mixture of reactants represented by the image on the right, which image below best represents the mixture in the flask after the reactants have reacted as completely as possible? Which is the limiting reactant? Which reactant is in excess?

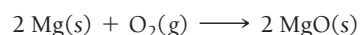


7.6
Cc

Conceptual
Connection

PEARSON
eText
2.0

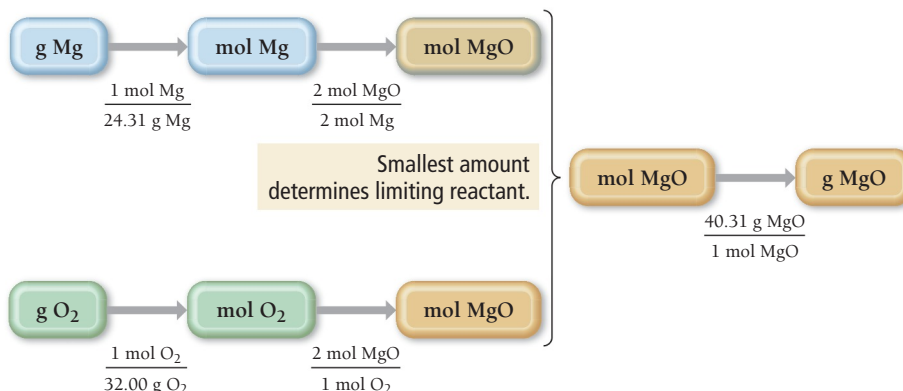
When working in the laboratory, we normally measure the initial quantities of reactants in grams, not in number of molecules. To find the limiting reactant and theoretical yield from initial masses, we must first convert the masses to amounts in moles. Consider the reaction:



A reaction mixture contains 42.5 g Mg and 33.8 g O₂; what are the limiting reactant and theoretical yield? To solve this problem, we must determine which of the reactants makes the least amount of product.

Conceptual Plan

We can determine the limiting reactant by calculating how much product can be made from each reactant. However, we are given the initial quantities in grams, and stoichiometric relationships are between moles, so we must first convert to moles. We then convert from moles of the reactant to moles of product. The reactant that makes the *least amount of product* is the limiting reactant. The conceptual plan is:



In this conceptual plan, we compare the number of moles of magnesium oxide made by each reactant and convert only the smaller amount to grams. (Alternatively, we can convert both quantities to grams and determine the limiting reactant based on the mass of the product.)

Relationships Used

molar mass Mg = 24.31 g Mg

molar mass O₂ = 32.00 g O₂

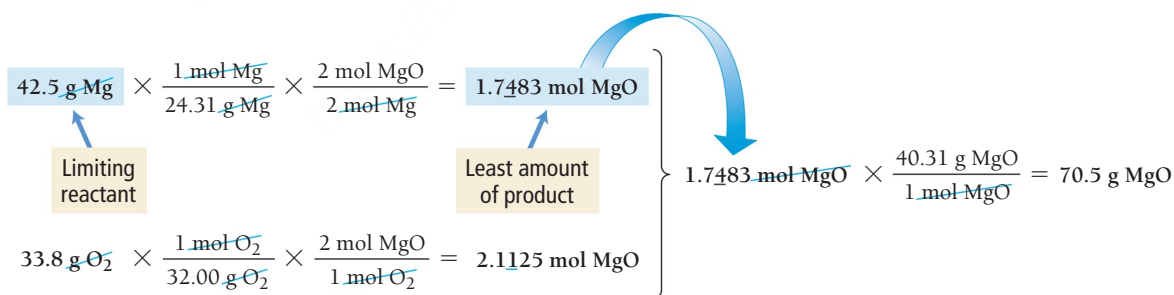
2 mol Mg : 2 mol MgO (from chemical equation)

1 mol O₂ : 2 mol MgO (from chemical equation)

molar mass MgO = 40.31 g MgO

Solution

Beginning with the masses of each reactant, we follow the conceptual plan to calculate how much product can be made from each.




Because magnesium makes the least amount of product, it is the limiting reactant, and oxygen is in excess. Notice that the limiting reactant is not necessarily the reactant with the least mass. In this case, the mass of O₂ is less than the mass of Mg, yet Mg is the limiting reactant because it makes the least amount of MgO. The theoretical yield is 70.5 g of MgO, the mass of product possible based on the limiting reactant.

Suppose that after the synthesis, the actual yield of MgO is 55.9 g. What is the percent yield? We calculate the percent yield as follows:

$$\% \text{ yield} = \frac{\text{actual yield}}{\text{theoretical yield}} \times 100\% = \frac{55.9 \text{ g}}{70.5 \text{ g}} \times 100\% = 79.3\%$$

EXAMPLE 7.6Interactive
Worked Example
Video 7.6PEARSON
eText
2.0**Limiting Reactant and Theoretical Yield**

Ammonia, NH_3 , can be synthesized by the reaction:

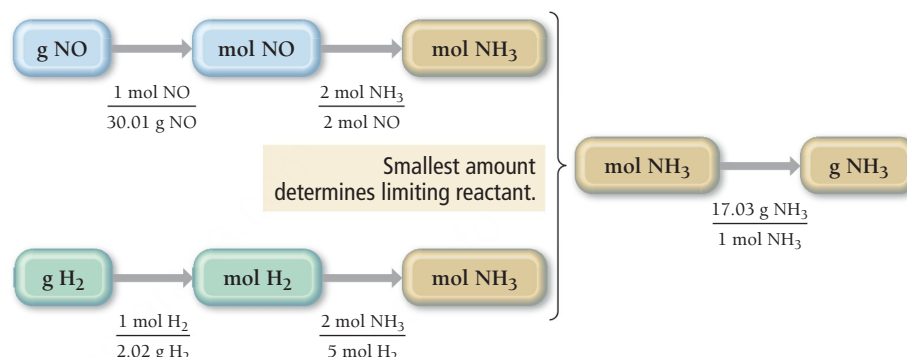


Starting with 86.3 g NO and 25.6 g H_2 , find the theoretical yield of ammonia in grams.

SORT You are given the mass of each reactant in grams and asked to find the theoretical yield of a product.

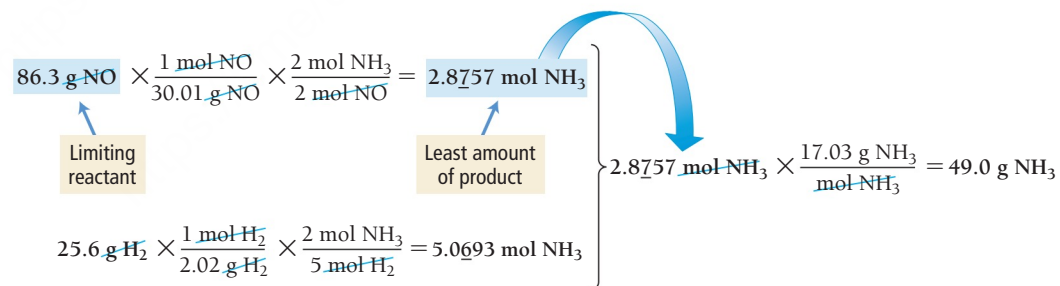
GIVEN: 86.3 g NO, 25.6 g H_2
FIND: theoretical yield of $\text{NH}_3(g)$

STRATEGIZE Determine which reactant makes the least amount of product by converting from grams of each reactant to moles of the reactant to moles of the product. Use molar masses to convert between grams and moles and use the stoichiometric relationships (from the balanced chemical equation) to convert between moles of reactant and moles of product. Remember that the reactant that makes *the least amount of product* is the limiting reactant. Convert the number of moles of product obtained using the limiting reactant to grams of product.

CONCEPTUAL PLAN**RELATIONSHIPS USED**

molar mass NO = 30.01 g/mol
 molar mass H_2 = 2.02 g/mol
 $2 \text{ mol NO} : 2 \text{ mol NH}_3$ (from chemical equation)
 $5 \text{ mol H}_2 : 2 \text{ mol NH}_3$ (from chemical equation)
 molar mass NH_3 = 17.03 g/mol

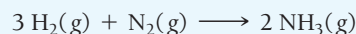
SOLVE Beginning with the given mass of each reactant, calculate the amount of product that can be made in moles. Convert the amount of product made by the limiting reactant to grams—this is the theoretical yield.

SOLUTION

CHECK The units of the answer (g NH_3) are correct. The magnitude (49.0 g) seems reasonable given that 86.3 g NO is the limiting reactant. NO contains one oxygen atom per nitrogen atom, and NH_3 contains three hydrogen atoms per nitrogen atom. Three hydrogen atoms have less mass than one oxygen atom, so it is reasonable that the mass of NH_3 obtained is less than the mass of NO.

FOR PRACTICE 7.6

Ammonia can also be synthesized by the reaction:



What is the theoretical yield of ammonia, in kg, that we can synthesize from 5.22 kg of H_2 and 31.5 kg of N_2 ?

EXAMPLE 7.7

Limiting Reactant and Theoretical Yield

We can obtain titanium metal from its oxide according to the following balanced equation:



When 28.6 kg of C reacts with 88.2 kg of titanium(IV) oxide, 42.8 kg of titanium is produced. Find the limiting reactant, theoretical yield (in kg), and percent yield.

SORT You are given the mass of each reactant and the mass of product formed. You are asked to find the limiting reactant, theoretical yield, and percent yield.

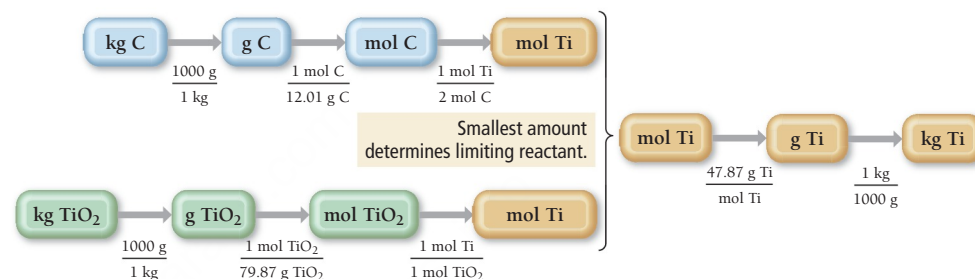
GIVEN: 28.6 kg C, 88.2 kg TiO_2 , 42.8 kg Ti produced

FIND: limiting reactant, theoretical yield, % yield

STRATEGIZE Determine which of the reactants makes the least amount of product by converting from kilograms of each reactant to moles of product. Convert between grams and moles using molar mass. Convert between moles of reactant and moles of product using the stoichiometric relationships derived from the balanced chemical equation. The reactant that makes the *least amount of product* is the limiting reactant.

Determine the theoretical yield (in kg) by converting the number of moles of product obtained with the limiting reactant to kilograms of product.

CONCEPTUAL PLAN



RELATIONSHIPS USED

$$1000 \text{ g} = 1 \text{ kg}$$

$$\text{molar mass of C} = 12.01 \text{ g/mol}$$

$$\text{molar mass of TiO}_2 = 79.87 \text{ g/mol}$$

$$1 \text{ mol TiO}_2 : 1 \text{ mol Ti (from chemical equation)}$$

$$2 \text{ mol C} : 1 \text{ mol Ti (from chemical equation)}$$

$$\text{molar mass of Ti} = 47.87 \text{ g/mol}$$

SOLVE Beginning with the actual amount of each reactant, calculate the amount of product that can be made in moles. Convert the amount of product made by the limiting reactant to kilograms—this is the theoretical yield.

SOLUTION

$$\begin{aligned} &28.6 \text{ kg C} \times \frac{1000 \text{ g}}{1 \text{ kg}} \times \frac{1 \text{ mol C}}{12.01 \text{ g C}} \times \frac{1 \text{ mol Ti}}{2 \text{ mol C}} = 1.1907 \times 10^3 \text{ mol Ti} \\ &88.2 \text{ kg TiO}_2 \times \frac{1000 \text{ g}}{1 \text{ kg}} \times \frac{1 \text{ mol TiO}_2}{79.87 \text{ g TiO}_2} \times \frac{1 \text{ mol Ti}}{1 \text{ mol TiO}_2} = 1.1043 \times 10^3 \text{ mol Ti} \end{aligned}$$

Limiting reactant (TiO₂) produces the least amount of product.

$$1.1043 \times 10^3 \text{ mol Ti} \times \frac{47.87 \text{ g Ti}}{1 \text{ mol Ti}} \times \frac{1 \text{ kg}}{1000 \text{ g}} = 52.9 \text{ kg Ti}$$

Calculate the percent yield by dividing the actual yield (42.8 kg Ti) by the theoretical yield.

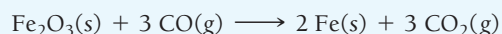
Since TiO_2 makes the least amount of product, it is the limiting reactant, and 52.9 kg Ti is the theoretical yield.

$$\% \text{ yield} = \frac{\text{actual yield}}{\text{theoretical yield}} \times 100\% = \frac{42.8 \text{ g}}{52.9 \text{ g}} \times 100\% = 80.9\%$$

CHECK The theoretical yield has the correct units (kg Ti) and has a reasonable magnitude compared to the mass of TiO_2 . Because titanium has a lower molar mass than titanium(IV) oxide, the amount of Ti made from TiO_2 should have a lower mass. The percent yield is reasonable (under 100% as it should be).

FOR PRACTICE 7.7

Mining companies use this reaction to obtain iron from iron ore:



The reaction of 167 g Fe_2O_3 with 85.8 g CO produces 72.3 g Fe. Determine the limiting reactant, theoretical yield, and percent yield.

Reactant in Excess

We have now seen how the limiting reactant limits the amount of product that a chemical reaction produces. If the reaction goes to completion, the limiting reactant is completely consumed. The reactant in excess, by contrast, is not completely consumed; some of it remains in the reaction mixture after the reaction is complete. Returning to the pizza analogy from earlier in this section, recall that if we have 4 crusts, 10 cups of cheese, and 15 ounces of tomato sauce, the tomato sauce is the limiting reactant. The tomato sauce is completely consumed while the other ingredients are not. We can calculate how much of the excess reactant (or reactants) remains after the reaction is complete from the relationships in the recipe.



For example, to calculate the amount of crust remaining, we first calculate how many crusts are consumed by the amount of limiting reactant. We use the relationship between the crust and the tomato sauce from the recipe.

$$15 \text{ ounces tomato sauce} \times \frac{1 \text{ crust}}{5 \text{ ounces tomato sauce}} = 3 \text{ crusts}$$

Then we subtract the number of crusts used from the number of crusts we had initially to determine how many crusts remain.

$$4 \text{ crusts} - 3 \text{ crusts} = 1 \text{ crust}$$

One crust remains after we have used up all the tomato sauce. Similar concepts apply to a chemical reaction. To determine how much of a reactant in excess remains after the reaction has gone to completion, we figure out the amount of that reactant needed to react with the limiting reactant and then subtract that amount from the initial amount as shown in Example 7.8.

EXAMPLE 7.8

Reactant in Excess

Recall from Example 7.7 that we can extract titanium metal from its oxide according to the following balanced equation:



Recall further that in a reaction mixture containing 28.6 kg of C and 88.2 kg of TiO_2 , TiO_2 is the limiting reactant. Calculate the mass of the reactant in excess (which is carbon) that remains after the reaction has gone to completion.

SORT You are given the mass of each reactant and asked to find the mass of the excess reactant remaining after the reaction has gone to completion. You know from Example 7.7 that TiO_2 is the limiting reactant.

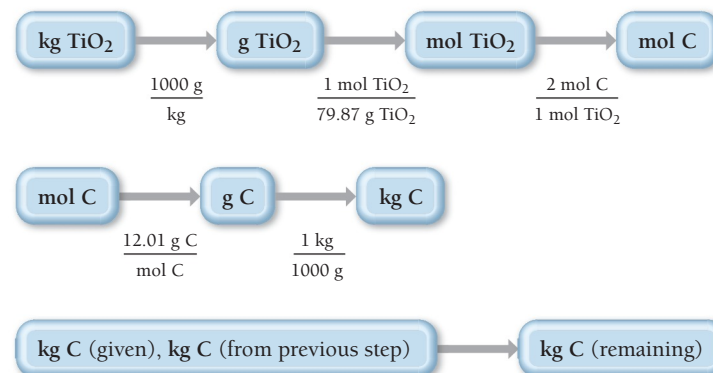
STRATEGIZE Determine how much carbon is needed to completely react with the given amount of titanium dioxide. Begin with kg TiO_2 and convert first to mol TiO_2 and then to mol C. Convert between grams and moles using molar mass. Convert between mol TiO_2 and mol C using the stoichiometric relationship from the balanced chemical equation. Then convert mol C to kg C. This is the amount of C needed to react with the given amount of TiO_2 (which is the limiting reactant).

Now you use the given kg C. Subtract the kg C needed to react with the limiting reactant (from the previous step) to determine the kg remaining.

GIVEN: 28.6 kg C, 88.2 kg TiO_2 (limiting)

FIND: kg C remaining

CONCEPTUAL PLAN



—Continued on the next page

Continued from the previous page—

	RELATIONSHIPS USED $1000 \text{ g} = 1 \text{ kg}$ $1 \text{ mol TiO}_2 : 2 \text{ mol C}$ (from chemical equation) molar mass of C = 12.01 g/mol molar mass of TiO_2 = 79.87 g/mol
SOLVE <p>Begin with kg TiO_2 and carry out the conversions to arrive at mol C.</p> <p>Then convert mol C to kg C. This is the mass of C that reacts with the limiting reactant.</p> <p>Finally, subtract the kg C you just calculated from the initial kg C given in the problem to determine the kg C remaining.</p>	SOLUTION $88.2 \text{ kg TiO}_2 \times \frac{1000 \text{ g}}{\text{kg}} \times \frac{1 \text{ mol TiO}_2}{79.87 \text{ g TiO}_2} \times \frac{2 \text{ mol C}}{1 \text{ mol TiO}_2} = 2.2086 \times 10^3 \text{ mol C}$ $2.2086 \times 10^3 \text{ mol C} \times \frac{12.01 \text{ g C}}{\text{mol C}} \times \frac{1 \text{ kg}}{1000 \text{ g}} = 26.525 \text{ kg C}$ $\text{mass C remaining} = 28.6 \text{ kg C} - 26.525 \text{ kg C} = 2.1 \text{ kg C}$
CHECK The mass of carbon has the right units (kg C). It also seems to be a reasonable mass given that the reaction mixture initially had almost 29 kg C—most of the carbon reacted to leave about 2 kg C.	
FOR PRACTICE 7.8 Recall from Example 7.8 that mining companies extract iron from iron ore according to the following balanced equation: $\text{Fe}_2\text{O}_3(\text{s}) + 3 \text{ CO}(\text{g}) \longrightarrow 2 \text{ Fe}(\text{s}) + 3 \text{ CO}_2(\text{g})$ In a reaction mixture containing 167 g Fe_2O_3 and 85.8 g CO, CO is the limiting reactant. Calculate the mass of the reactant in excess (which is Fe_2O_3) that remains after the reaction has gone to completion.	



7.7 Cc

Conceptual Connection

Reactant in Excess

Nitrogen dioxide reacts with water to form nitric acid and nitrogen monoxide according to the equation:




Suppose that 5 mol NO_2 and 1 mol H_2O combine and react completely. How many moles of the reactant in excess are present after the reaction has completed?

7.6 Three Examples of Chemical Reactions: Combustion, Alkali Metals, and Halogens

In this section, we examine three types of reactions. The first is combustion reactions, which we encountered in Section 7.1. The second is the reactions of the alkali metals. As we discussed in Chapter 3, alkali metals have low first ionization energies and are among the most active metals. Alkali metals reactions are good examples of the types of reactions that many metals undergo. The third type of reactions involves the halogens. Halogens have among the most negative (most exothermic) electron affinities and are therefore among the most active nonmetals.

Combustion Reactions

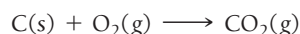
A **combustion reaction** involves the reaction of a substance with O_2 to form one or more oxygen-containing compounds, often including water. Combustion reactions also emit heat. For example, as you saw earlier in this chapter, natural gas (CH_4) reacts with oxygen to form carbon dioxide and water:



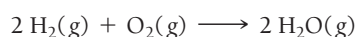
Ethanol, the alcohol in alcoholic beverages, also reacts with oxygen in a combustion reaction to form carbon dioxide and water:



Compounds containing carbon and hydrogen—or carbon, hydrogen, and oxygen—always form carbon dioxide and water upon complete combustion. Other combustion reactions include the reaction of carbon with oxygen to form carbon dioxide:



and the reaction of hydrogen with oxygen to form water:



We can write chemical equations for most combustion reactions by noticing the pattern of reactivity. Any carbon in a combustion reaction reacts with oxygen to produce carbon dioxide, and any hydrogen reacts with oxygen to form water.

EXAMPLE 7.9

Writing Equations for Combustion Reactions

Write a balanced equation for the combustion of liquid methyl alcohol (CH_3OH).

SOLUTION

Begin by writing an unbalanced equation showing the reaction of CH_3OH with O_2 to form CO_2 and H_2O .



Balance the equation using the guidelines from Section 7.3.

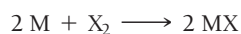


FOR PRACTICE 7.9

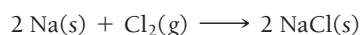
Write a balanced equation for the complete combustion of liquid C_2H_5SH .

Alkali Metal Reactions

The alkali metals (group 1A) have ns^1 outer electron configurations. The single valence electron that prevents these metals from having noble gas configurations is easily removed (the metals have low ionization energies), making these elements the most active metals in the periodic table. The reactions of the alkali metals with nonmetals are vigorous. For example, the alkali metals (M) react with halogens (X) according to the reaction:



The reaction of sodium and chlorine to form sodium chloride is typical:




This reaction emits heat and sparks as it occurs (**Figure 7.6** ▶). Each successive alkali metal reacts even more vigorously with chlorine.

The alkali metals also react with water to form the dissolved alkali metal ion, the hydroxide ion, and hydrogen gas:



▲ **FIGURE 7.6** Reaction of Sodium and Chlorine to Form Sodium Chloride

Reactions of the Alkali Metals with Water

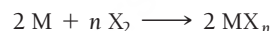


▲ **FIGURE 7.7 Reactions of the Alkali Metals with Water** The reactions become progressively more vigorous as we move down the group.

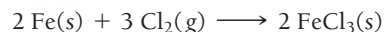
The reaction is highly exothermic and can be explosive because the heat from the reaction can ignite the hydrogen gas. The reaction becomes more explosive as we move down the column from one metal to the next, as shown in **Figure 7.7** ▲.*

Halogen Reactions

The halogens (group 7A) have ns^2np^5 outer electron configurations. The one electron needed to attain a noble gas configuration is easily acquired (the halogens have highly negative electron affinities), making these elements among the most active nonmetals in the periodic table. The halogens all react with many metals to form *metal halides* according to the equation:

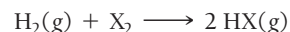


where M is the metal, X is the halogen, and MX_n is the metal halide. For example, chlorine reacts with iron according to the equation:



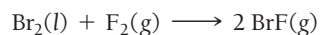
Since metals tend to lose electrons and the halogens tend to gain them, the metal halides—like all compounds that form between metals and nonmetals—contain ionic bonds.

The halogens also react with hydrogen to form *hydrogen halides* according to the equation:

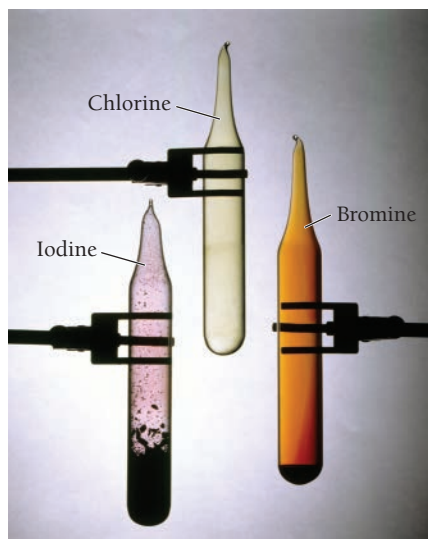


The hydrogen halides—like all compounds that form between two nonmetals—contain covalent bonds. As we will see in Chapter 8, all of the hydrogen halides form acidic solutions when combined with water.

The halogens also react with each other to form *interhalogen compounds*. For example, bromine reacts with fluorine according to the equation:



Again, like all compounds that form between two nonmetals, the interhalogen compounds contain covalent bonds.



▲ Three Halogens

*The rate of the alkali metal reaction with water, and therefore its vigor, is enhanced by the successively lower melting points of the alkali metals as we move down the column. The low melting points of the heavier metals allow the emitted heat to actually melt the metal, increasing the reaction rate.

EXAMPLE 7.10**Alkali Metal and Halogen Reactions**

Write a balanced chemical equation for each reaction.

- the reaction between potassium metal and bromine gas
- the reaction between rubidium metal and liquid water
- the reaction between gaseous chlorine and solid iodine

SOLUTION

(a) Alkali metals react with halogens to form metal halides. Write the formulas for the reactants and the metal halide product (making sure to write the correct ionic chemical formula for the metal halide, as outlined in Section 4.6), and then balance the equation.	$2 \text{K(s)} + \text{Br}_2\text{(g)} \longrightarrow 2 \text{KBr(s)}$
(b) Alkali metals react with water to form the dissolved metal ion, the hydroxide ion, and hydrogen gas. Write the skeletal equation including these and then balance it.	$2 \text{Rb(s)} + 2 \text{H}_2\text{O(l)} \longrightarrow 2 \text{Rb}^+\text{(aq)} + 2 \text{OH}^-\text{(aq)} + \text{H}_2\text{(g)}$
(c) Halogens react with each other to form interhalogen compounds. Write the skeletal equation with the halogens as the reactants and the interhalogen compound as the product and balance the equation.	$\text{Cl}_2\text{(g)} + \text{I}_2\text{(s)} \longrightarrow 2 \text{ICl(g)}$


FOR PRACTICE 7.10

Write a balanced chemical equation for each reaction.

- the reaction between aluminum metal and chlorine gas
- the reaction between lithium metal and liquid water
- the reaction between gaseous hydrogen and liquid bromine

SELF-ASSESSMENT**QUIZ**

1. What are the correct coefficients (reading from left to right) when the chemical equation is balanced?



- a) 1, 3, 1, 3 b) 1, 2, 1, 1 c) 1, 3, 2, 1 d) 3, 6, 1, 9

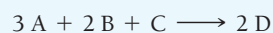
2. Which change is a physical change?

- a) wood burning b) iron rusting
c) dynamite exploding d) gasoline evaporating

3. Which property of rubbing alcohol is a chemical property?

- a) density (0.786 g/cm³) b) flammability
c) boiling point (82.5°C) d) melting point (−89°C)

4. For the reaction shown here, 3.5 mol A is mixed with 5.9 mol B and 2.2 mol C. What is the limiting reactant?



- a) A b) B c) C d) D

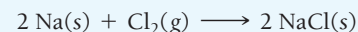
5. Manganese(IV) oxide reacts with aluminum to form elemental manganese and aluminum oxide.



What mass of Al is required to completely react with 25.0 g MnO₂?

- a) 7.76 g Al b) 5.82 g Al
c) 33.3 g Al d) 10.3 g Al

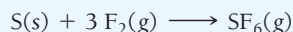
6. Sodium and chlorine react to form sodium chloride.



What is the theoretical yield of sodium chloride for the reaction of 55.0 g Na with 67.2 g Cl₂?

- a) 1.40×10^2 g NaCl
b) 111 g NaCl
c) 55.4 g NaCl
d) 222 g NaCl

7. Sulfur and fluorine react to form sulfur hexafluoride.



If 50.0 g S reacts as completely as possible with 105.0 g $\text{F}_2(\text{g})$, what mass of the excess reactant remains?

- a) 20.5 g S b) 45.7 g F_2
 c) 15.0 g S d) 36.3 g F_2
8. A reaction has a theoretical yield of 45.8 g. When the reaction is carried out, 37.2 g of the product forms. What is the percent yield?
- a) 55.1% b) 44.8%
 c) 123% d) 81.2%

9. Identify the correct balanced equation for the combustion of propane (
- C_3H_8
-).

- a) $\text{C}_3\text{H}_8(\text{g}) \longrightarrow 4 \text{H}_2(\text{g}) + 3 \text{C}(\text{s})$
 b) $\text{C}_3\text{H}_8(\text{g}) + 5 \text{O}_2(\text{g}) \longrightarrow 4 \text{H}_2\text{O}(\text{g}) + 3 \text{CO}_2(\text{g})$
 c) $\text{C}_3\text{H}_8(\text{g}) + 3 \text{O}_2(\text{g}) \longrightarrow 4 \text{H}_2\text{O}(\text{g}) + 3 \text{CO}_2(\text{g})$
 d) $2 \text{C}_3\text{H}_8(\text{g}) + 9 \text{O}_2(\text{g}) \longrightarrow 6 \text{H}_2\text{CO}_3(\text{g}) + 2 \text{H}_2(\text{g})$

10. Solid potassium chlorate (
- KClO_3
-) decomposes into potassium chloride and oxygen gas when heated. How many moles of oxygen form when 55.8 g completely decomposes?

- a) 0.455 mol O_2 b) 0.304 mol O_2
 c) 83.7 mol O_2 d) 0.683 mol O_2

Answers: 1. a; 2. d; 3. b; 4. a; 5. d; 6. b; 7. a; 8. d; 9. d; 10. d

CHAPTER SUMMARY 7

REVIEW

MasteringChemistry™ provides end-of-chapter exercises, feedback-enriched tutorial problems, animations, and interactive activities to encourage problem solving practice and deeper understanding of key concepts and topics.

KEY LEARNING OUTCOMES

CHAPTER OBJECTIVES	ASSESSMENT
Balance Chemical Equations (7.3)	• Examples 7.1, 7.2, 7.3 For Practice 7.1, 7.2, 7.3 Exercises 23–34
Make Calculations Involving the Stoichiometry of a Reaction (7.4)	• Examples 7.4, 7.5 For Practice 7.4, 7.5 Exercises 35–44
Determine the Limiting Reactant and Calculate Theoretical and Percent Yield (7.5)	• Examples 7.6, 7.7 For Practice 7.6, 7.7 Exercises 45–50, 53, 54, 57–60
Determine the Amount of Reactant in Excess (7.5)	• Example 7.8 For Practice 7.8 Exercises 51, 52, 55, and 56
Write Equations for Combustion Reactions (7.6)	• Example 7.9 For Practice 7.9 Exercises 61, 62
Write Reactions for Alkali Metal and Halogen Reactions (7.6)	• Example 7.10 For Practice 7.10 Exercises 63–68

KEY TERMS

Section 7.2

chemical change (289)
 physical changes (289)
 chemical property (289)
 physical property (289)

Section 7.3

chemical reaction (290)
 chemical equation (290)
 reactants (290)
 products (290)

Section 7.4

stoichiometry (295)

Section 7.5

limiting reactant (299)
 theoretical yield (300)

actual yield (300)
 percent yield (300)

Section 7.6

combustion reaction (307)

KEY CONCEPTS

Climate Change and the Combustion of Fossil Fuels (7.1)

- Greenhouse gases warm Earth by trapping some of the sunlight that penetrates Earth's atmosphere. Increases in atmospheric carbon dioxide levels (a major greenhouse gas) have led to global warming.
- The largest source of atmospheric carbon dioxide is the burning of fossil fuels. This can be verified by reaction stoichiometry.

Chemical Change (7.2)

- Changes in matter in which composition changes are chemical changes. Changes in matter in which composition does not change are physical changes.
- We classify the properties of matter into two types: physical and chemical. Matter displays its physical properties without changing its composition.

Writing and Balancing Chemical Equations (7.3)

- In chemistry, we represent chemical reactions with chemical equations. The substances on the left-hand side of a chemical equation are the reactants, and the substances on the right-hand side are the products.
- Chemical equations are balanced when the number of each type of atom on the left side of the equation is equal to the number on the right side.

Reaction Stoichiometry (7.4)

- Reaction stoichiometry refers to the numerical relationships between the reactants and products in a balanced chemical equation.
- Reaction stoichiometry allows us to predict, for example, the amount of product that can form from a given amount of reactant, or how much of one reactant is required to react with a given amount of another.

Limiting Reactant, Theoretical Yield, Percent Yield, and Reactant in Excess (7.5)

- When a chemical reaction actually occurs, the reactants are usually not present in the exact stoichiometric ratios specified by the balanced chemical equation. The limiting reactant is the one that is

available in the smallest stoichiometric quantity—it is completely consumed in the reaction, and it limits the amount of product that can be made.

- Any reactant that does not limit the amount of product is said to be in excess. The reactant in excess occurs in a quantity greater than is required to completely react with the limiting reactant.
- The amount of product that can be made from the limiting reactant is the theoretical yield.
- The actual yield—always equal to or less than the theoretical yield—is the amount of product that is actually made when the reaction is carried out.
- The percentage of the theoretical yield that is actually produced is the percent yield.

Combustion, Alkali Metal, and Halogen Reactions (7.6)

- In a combustion reaction a substance reacts with oxygen—emitting heat and forming one or more oxygen-containing products. The alkali metals react with nonmetals, losing electrons in the process.
- The halogens react with many metals to form metal halides. They also react with hydrogen to form hydrogen halides and with one another to form interhalogen compounds.

KEY EQUATIONS AND RELATIONSHIPS

Mass-to-Mass Conversion: Stoichiometry (7.4)

mass A \longrightarrow amount A (in moles) \longrightarrow amount B (in moles) \longrightarrow mass B

Percent Yield (7.5)

$$\% \text{ yield} = \frac{\text{actual yield}}{\text{theoretical yield}} \times 100\%$$

EXERCISES

REVIEW QUESTIONS

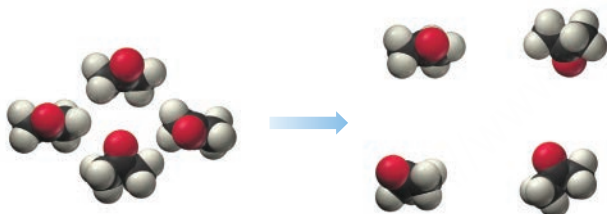
1. What is the greenhouse effect?
2. Why are scientists concerned about increases in atmospheric carbon dioxide? What is the source of the increase?
3. What is the difference between a physical change and a chemical change? List some examples of each.
4. What is the difference between a physical property and a chemical property?
5. What is a balanced chemical equation?
6. Why must chemical equations be balanced?
7. What is reaction stoichiometry? What is the significance of the coefficients in a balanced chemical equation?
8. In a chemical reaction, what is the limiting reactant? What do we mean when we say a reactant is in excess?
9. In a chemical reaction, what is the theoretical yield? The percent yield?
10. We typically calculate the percent yield using the actual yield and theoretical yield in units of mass (g or kg). Would the percent yield be different if the actual yield and theoretical yield were in units of amount (moles)?
11. Where does our society get the majority of its energy?
12. What is a combustion reaction? Why are they important? Give an example.
13. Write a general equation for the reaction of an alkali metal with:
 - a. a halogen
 - b. water
14. Write a general equation for the reaction of a halogen with:
 - a. a metal
 - b. hydrogen
 - c. another halogen

PROBLEMS BY TOPIC

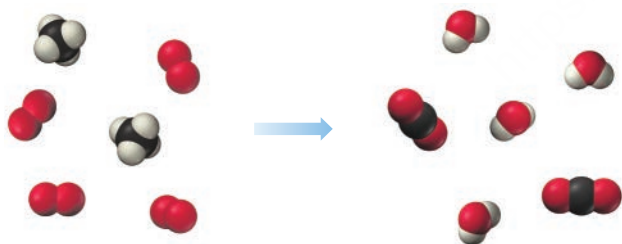
Note: Answers to all odd-numbered Problems, numbered in blue, can be found in Appendix III. Exercises in the Problems by Topic section are paired, with each odd-numbered problem followed by a similar even-numbered problem. Exercises in the Cumulative Problems section are also paired but more loosely. Because of their nature, Challenge Problems and Conceptual Problems are unpaired.

Chemical and Physical Changes

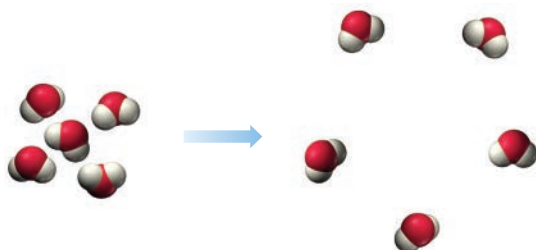
15. Classify each change as physical or chemical.
- Natural gas burns in a stove.
 - The liquid propane in a gas grill evaporates because the valve was left open.
 - The liquid propane in a gas grill burns in a flame.
 - A bicycle frame rusts on repeated exposure to air and water.
16. Classify each change as physical or chemical.
- Sugar burns when heated on a skillet.
 - Sugar dissolves in water.
 - A platinum ring becomes dull because of continued abrasion.
 - A silver surface becomes tarnished after exposure to air for a long period of time.
17. Based on the molecular diagram, classify each change as physical or chemical.



a.



b.



c.


18. Based on the molecular diagram, classify each change as physical or chemical.



a.



b.



c.

19. Classify each of the listed properties of isopropyl alcohol (also known as rubbing alcohol) as physical or chemical.
- colorless
 - flammable
 - liquid at room temperature
 - density = 0.79 g/mL
 - mixes with water
20. Classify each of the listed properties of ozone (a pollutant in the lower atmosphere, but part of a protective shield against UV light in the upper atmosphere) as physical or chemical.
- bluish color
 - pungent odor
 - very reactive
 - decomposes on exposure to ultraviolet light
 - gas at room temperature
21. Classify each property as physical or chemical.
- the tendency of ethyl alcohol to burn
 - the shine of silver
 - the odor of paint thinner
 - the flammability of propane gas
22. Classify each property as physical or chemical.
- the boiling point of ethyl alcohol
 - the temperature at which dry ice evaporates
 - the tendency of iron to rust
 - the color of gold

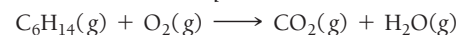
Writing and Balancing Chemical Equations

23. Sulfuric acid (H_2SO_4) is a component of acid rain that forms when gaseous sulfur dioxide pollutant reacts with gaseous oxygen and liquid water to form aqueous sulfuric acid. Write a balanced chemical equation for this reaction. (Note: This is a simplified representation of this reaction.)

24. Nitric acid (HNO_3) is a component of acid rain that forms when gaseous nitrogen dioxide pollutant reacts with gaseous oxygen and liquid water to form aqueous nitric acid. Write a balanced chemical equation for this reaction. (Note: This is a simplified representation of this reaction.)
25. In a popular classroom demonstration, solid sodium is added to liquid water and reacts to produce hydrogen gas and aqueous sodium hydroxide. Write a balanced chemical equation for this reaction.
26. When iron rusts, solid iron reacts with gaseous oxygen to form solid iron(III) oxide. Write a balanced chemical equation for this reaction.
27. Write a balanced chemical equation for the fermentation of sucrose ($\text{C}_{12}\text{H}_{22}\text{O}_{11}$) by yeasts in which the aqueous sugar reacts with liquid water to form aqueous ethyl alcohol ($\text{C}_2\text{H}_5\text{OH}$) and carbon dioxide gas.
28. Write a balanced equation for the photosynthesis reaction in which gaseous carbon dioxide and liquid water react in the presence of chlorophyll to produce aqueous glucose ($\text{C}_6\text{H}_{12}\text{O}_6$) and oxygen gas.
29. Write a balanced chemical equation for each reaction.
- Solid lead(II) sulfide reacts with aqueous hydrobromic acid (HBr) to form solid lead(II) bromide and dihydrogen monosulfide gas.
 - Gaseous carbon monoxide reacts with hydrogen gas to form gaseous methane (CH_4) and liquid water.
 - Aqueous hydrochloric acid (HCl) reacts with solid manganese(IV) oxide to form aqueous manganese(II) chloride, liquid water, and chlorine gas.
 - Liquid pentane (C_5H_{12}) reacts with gaseous oxygen to form gaseous carbon dioxide and liquid water.
30. Write a balanced chemical equation for each reaction.
- Solid copper reacts with solid sulfur to form solid copper(I) sulfide.
 - Solid iron(III) oxide reacts with hydrogen gas to form solid iron and liquid water.
 - Sulfur dioxide gas reacts with oxygen gas to form sulfur trioxide gas.
 - Gaseous ammonia (NH_3) reacts with gaseous oxygen to form gaseous nitrogen monoxide and gaseous water.
31. Write a balanced chemical equation for the reaction of aqueous sodium carbonate with aqueous copper(II) chloride to form solid copper(II) carbonate and aqueous sodium chloride.
32. Write a balanced chemical equation for the reaction of aqueous potassium hydroxide with aqueous iron(III) chloride to form solid iron(III) hydroxide and aqueous potassium chloride.
33. Balance each chemical equation.
- $\text{CO}_2(\text{g}) + \text{CaSiO}_3(\text{s}) + \text{H}_2\text{O}(\text{l}) \longrightarrow \text{SiO}_2(\text{s}) + \text{Ca}(\text{HCO}_3)_2(\text{aq})$
 - $\text{Co}(\text{NO}_3)_3(\text{aq}) + (\text{NH}_4)_2\text{S}(\text{aq}) \longrightarrow \text{Co}_2\text{S}_3(\text{s}) + \text{NH}_4\text{NO}_3(\text{aq})$
 - $\text{Cu}_2\text{O}(\text{s}) + \text{C}(\text{s}) \longrightarrow \text{Cu}(\text{s}) + \text{CO}(\text{g})$
 - $\text{H}_2(\text{g}) + \text{Cl}_2(\text{g}) \longrightarrow \text{HCl}(\text{g})$
34. Balance each chemical equation.
- $\text{Na}_2\text{S}(\text{aq}) + \text{Cu}(\text{NO}_3)_2(\text{aq}) \longrightarrow \text{NaNO}_3(\text{aq}) + \text{CuS}(\text{s})$
 - $\text{N}_2\text{H}_4(\text{l}) \longrightarrow \text{NH}_3(\text{g}) + \text{N}_2(\text{g})$
 - $\text{HCl}(\text{aq}) + \text{O}_2(\text{g}) \longrightarrow \text{H}_2\text{O}(\text{l}) + \text{Cl}_2(\text{g})$
 - $\text{FeS}(\text{s}) + \text{HCl}(\text{aq}) \longrightarrow \text{FeCl}_2(\text{aq}) + \text{H}_2\text{S}(\text{g})$

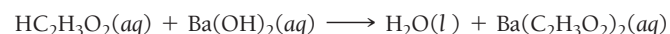
Reaction Stoichiometry

35. Consider the unbalanced equation for the combustion of hexane:



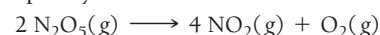
Balance the equation and determine how many moles of O_2 are required to react completely with 7.2 moles C_6H_{14} .

36. Consider the unbalanced equation for the neutralization of acetic acid:



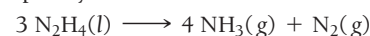
Balance the equation and determine how many moles of $\text{Ba}(\text{OH})_2$ are required to completely neutralize 0.461 mole of $\text{HC}_2\text{H}_3\text{O}_2$.

37. Calculate how many moles of NO_2 form when each quantity of reactant completely reacts.



- 2.5 mol N_2O_5
- 6.8 mol N_2O_5
- 15.2 g N_2O_5
- 2.87 kg N_2O_5

38. Calculate how many moles of NH_3 form when each quantity of reactant completely reacts.



- 2.6 mol N_2H_4
- 3.55 mol N_2H_4
- 65.3 g N_2H_4
- 4.88 kg N_2H_4

39. Consider the balanced equation:



Complete the following table showing the appropriate number of moles of reactants and products. If the number of moles of a *reactant* is provided, fill in the required amount of the other reactant, as well as the moles of each product that forms. If the number of moles of a *product* is provided, fill in the required amount of each reactant to make that amount of product, as well as the amount of the other product that is made.

Mol SiO_2	Mol C	Mol SiC	Mol CO
3	_____	_____	_____
_____	6	_____	_____
_____	_____	_____	10
2.8	_____	_____	_____
_____	1.55	_____	_____


40. Consider the balanced equation:



Complete the following table showing the appropriate number of moles of reactants and products. If the number of moles of a *reactant* is provided, fill in the required amount of the other reactant, as well as the moles of each product that forms. If the number of moles of a *product* is provided, fill in the required amount of each reactant to make that amount of product, as well as the amount of the other product that is made.

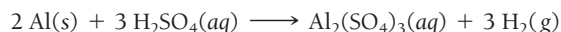
Mol N_2H_4	Mol N_2O_4	Mol N_2	Mol H_2O
2	_____	_____	_____
_____	5	_____	_____
_____	_____	_____	10
2.5	_____	_____	_____
_____	4.2	_____	_____
_____	_____	11.8	_____

41. Hydrobromic acid (HBr) dissolves solid iron according to the reaction:



What mass of HBr (in g) do you need to dissolve a 3.2-g pure iron bar on a padlock? What mass of H_2 can the complete reaction of the iron bar produce?

42. Sulfuric acid (H_2SO_4) dissolves aluminum metal according to the reaction:



Suppose you want to dissolve an aluminum block with a mass of 15.2 g. What minimum mass of H_2SO_4 (in g) do you need? What mass of H_2 gas (in g) can the complete reaction of the aluminum block produce?

43. For each of the reactions, calculate the mass (in grams) of the product that forms when 3.67 g of the underlined reactant completely reacts. Assume that there is more than enough of the other reactant.

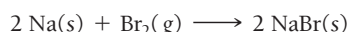
- $\text{Ba(s)} + \text{Cl}_2\text{(g)} \longrightarrow \text{BaCl}_2\text{(s)}$
- $\text{CaO(s)} + \text{CO}_2\text{(g)} \longrightarrow \text{CaCO}_3\text{(s)}$
- $2 \text{Mg(s)} + \text{O}_2\text{(g)} \longrightarrow 2 \text{MgO(s)}$
- $4 \text{Al(s)} + 3 \text{O}_2\text{(g)} \longrightarrow 2 \text{Al}_2\text{O}_3\text{(s)}$

44. For each of the reactions, calculate the mass (in grams) of the product that forms when 15.39 g of the underlined reactant completely reacts. Assume that there is more than enough of the other reactant.

- $2 \text{K(s)} + \text{Cl}_2\text{(g)} \longrightarrow 2 \text{KCl(s)}$
- $2 \text{K(s)} + \text{Br}_2\text{(l)} \longrightarrow 2 \text{KBr(s)}$
- $4 \text{Cr(s)} + 3 \text{O}_2\text{(g)} \longrightarrow 2 \text{Cr}_2\text{O}_3\text{(s)}$
- $2 \text{Sr(s)} + \text{O}_2\text{(g)} \longrightarrow 2 \text{SrO(s)}$

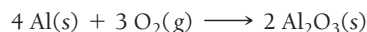
Limiting Reactant, Theoretical Yield, Percent Yield, and Reactant in Excess

45. For the following reaction, determine the limiting reactant for each of the initial amounts of reactants.




- 2 mol Na, 2 mol Br_2
- 1.8 mol Na, 1.4 mol Br_2
- 2.5 mol Na, 1 mol Br_2
- 12.6 mol Na, 6.9 mol Br_2

46. Find the limiting reactant for each initial amount of reactants.

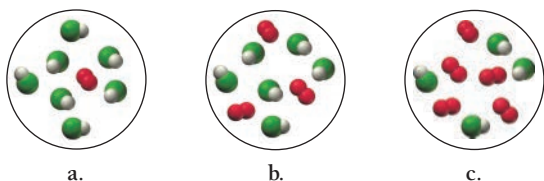


- 1 mol Al, 1 mol O_2
- 4 mol Al, 2.6 mol O_2
- 16 mol Al, 13 mol O_2
- 7.4 mol Al, 6.5 mol O_2

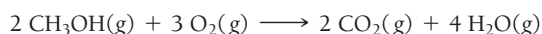
47. Consider the reaction:



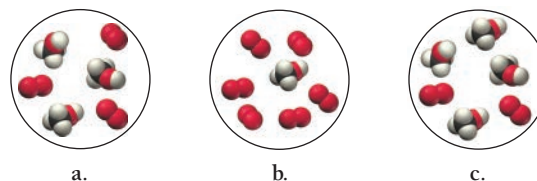
Each molecular diagram represents an initial mixture of the reactants. How many molecules of Cl_2 would form from the reaction mixture that produces the greatest amount of products?



48. Consider the reaction:



Each of the molecular diagrams represents an initial mixture of the reactants. How many CO_2 molecules would form from the reaction mixture that produces the greatest amount of products?

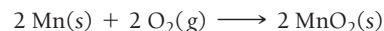


49. Calculate the theoretical yield of the product (in moles) for each initial amount of reactants.




- 4 mol Ti, 4 mol Cl_2
- 7 mol Ti, 17 mol Cl_2
- 12.4 mol Ti, 18.8 mol Cl_2

50. Calculate the theoretical yield of product (in moles) for each initial amount of reactants.



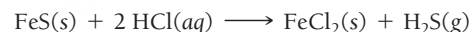
- 3 mol Mn, 3 mol O_2
- 4 mol Mn, 7 mol O_2
- 27.5 mol Mn, 43.8 mol O_2

51. Zinc sulfide reacts with oxygen according to the reaction:



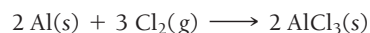
A reaction mixture initially contains 4.2 mol ZnS and 6.8 mol O_2 . Once the reaction has occurred as completely as possible, what amount (in moles) of the excess reactant remains?

52. Iron(II) sulfide reacts with hydrochloric acid according to the reaction:



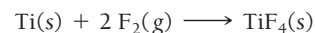
A reaction mixture initially contains 0.223 mol FeS and 0.652 mol HCl. Once the reaction has occurred as completely as possible, what amount (in moles) of the excess reactant is left?

53. For the reaction shown, calculate the theoretical yield of product (in grams) for each initial amount of reactants.



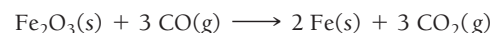
- 2.0 g Al, 2.0 g Cl_2
- 7.5 g Al, 24.8 g Cl_2
- 0.235 g Al, 1.15 g Cl_2

54. For the reaction shown, calculate the theoretical yield of the product (in grams) for each initial amount of reactants.



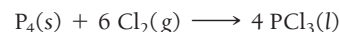
- 5.0 g Ti, 5.0 g F_2
- 2.4 g Ti, 1.6 g F_2
- 0.233 g Ti, 0.288 g F_2

55. Iron(III) oxide reacts with carbon monoxide according to the equation:



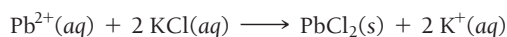
A reaction mixture initially contains 22.55 g Fe_2O_3 and 14.78 g CO. Once the reaction has occurred as completely as possible, what mass (in g) of the excess reactant remains?

56. Elemental phosphorus reacts with chlorine gas according to the equation:



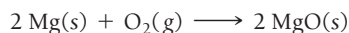
A reaction mixture initially contains 45.69 g P_4 and 131.3 g Cl_2 . Once the reaction has occurred as completely as possible, what mass (in g) of the excess reactant remains?

57. Lead(II) ions can be removed from solution with KCl according to the reaction:



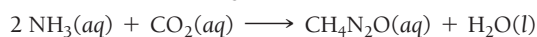
When 28.5 g KCl is added to a solution containing 25.7 g Pb^{2+} , a $\text{PbCl}_2(\text{s})$ forms. The solid is filtered and dried and found to have a mass of 29.4 g. Determine the limiting reactant, theoretical yield of PbCl_2 , and percent yield for the reaction.

58. Magnesium oxide can be made by heating magnesium metal in the presence of oxygen. The balanced equation for the reaction is:



When 10.1 g of Mg reacts with 10.5 g O_2 , 11.9 g MgO forms. Determine the limiting reactant, theoretical yield, and percent yield for the reaction.

59. Urea ($\text{CH}_4\text{N}_2\text{O}$) is a common fertilizer that is synthesized by the reaction of ammonia (NH_3) with carbon dioxide:



In an industrial synthesis of urea, a chemist combines 136.4 kg of ammonia with 211.4 kg of carbon dioxide and obtains 168.4 kg of urea. Determine the limiting reactant, theoretical yield of urea, and percent yield for the reaction.

60. Many computer chips are manufactured from silicon, which occurs in nature as SiO_2 . When SiO_2 is heated to melting, it reacts with solid carbon to form liquid silicon and carbon monoxide gas. In an industrial preparation of silicon, 155.8 kg of

SiO_2 reacts with 78.3 kg of carbon to produce 66.1 kg of silicon. Determine the limiting reactant, theoretical yield, and percent yield for the reaction.

Combustion, Alkali Metal, and Halogen Reactions

61. Complete and balance each combustion reaction equation.
- $\text{S}(\text{s}) + \text{O}_2(\text{g}) \longrightarrow$
 - $\text{C}_3\text{H}_6(\text{g}) + \text{O}_2(\text{g}) \longrightarrow$
 - $\text{Ca}(\text{s}) + \text{O}_2(\text{g}) \longrightarrow$
 - $\text{C}_5\text{H}_{12}\text{S}(\text{l}) + \text{O}_2(\text{g}) \longrightarrow$
62. Complete and balance each combustion reaction equation:
- $\text{C}_4\text{H}_6(\text{g}) + \text{O}_2(\text{g}) \longrightarrow$
 - $\text{C}(\text{s}) + \text{O}_2(\text{g}) \longrightarrow$
 - $\text{CS}_2(\text{s}) + \text{O}_2(\text{g}) \longrightarrow$
 - $\text{C}_3\text{H}_8\text{O}(\text{l}) + \text{O}_2(\text{g}) \longrightarrow$
63. Write a balanced chemical equation for the reaction of solid strontium with iodine gas.
64. Based on the ionization energies of the alkali metals (see Section 3.7), which alkali metal would you expect to undergo the most exothermic reaction with chlorine gas? Write a balanced chemical equation for the reaction.
65. Write a balanced chemical equation for the reaction of solid lithium with liquid water.
66. Write a balanced chemical equation for the reaction of solid potassium with liquid water.
67. Write a balanced equation for the reaction of hydrogen gas with bromine gas.
68. Write a balanced equation for the reaction of chlorine gas with fluorine gas.

CUMULATIVE PROBLEMS

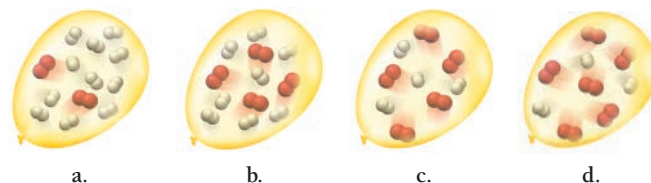
69. The combustion of gasoline produces carbon dioxide and water. Assume gasoline to be pure octane (C_8H_{18}) and calculate the mass (in kg) of carbon dioxide that is added to the atmosphere per 1.0 kg of octane burned. (*Hint:* Begin by writing a balanced equation for the combustion reaction.)
70. Many home barbecues are fueled with propane gas (C_3H_8). What mass of carbon dioxide (in kg) forms upon the complete combustion of 18.9 L of propane (approximate contents of one 5-gallon tank)? Assume that the density of the liquid propane in the tank is 0.621 g/mL. (*Hint:* Begin by writing a balanced equation for the combustion reaction.)
71. Aspirin can be made in the laboratory by reacting acetic anhydride ($\text{C}_4\text{H}_6\text{O}_3$) with salicylic acid ($\text{C}_7\text{H}_6\text{O}_3$) to form aspirin ($\text{C}_9\text{H}_8\text{O}_4$) and acetic acid ($\text{C}_2\text{H}_4\text{O}_2$). The balanced equation is:



In a laboratory synthesis, a student begins with 3.00 mL of acetic anhydride (density = 1.08 g/mL) and 1.25 g of salicylic acid. Once the reaction is complete, the student collects 1.22 g of aspirin. Determine the limiting reactant, theoretical yield of aspirin, and percent yield for the reaction.

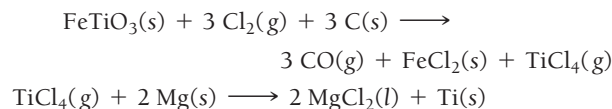
72. The combustion of liquid ethanol ($\text{C}_2\text{H}_5\text{OH}$) produces carbon dioxide and water. After 4.62 mL of ethanol (density = 0.789 g/mL) burns in the presence of 15.55 g of oxygen gas, 3.72 mL of water (density = 1.00 g/mL) is collected. Determine the limiting reactant, theoretical yield of H_2O , and percent yield for the reaction. (*Hint:* Write a balanced equation for the combustion of ethanol.)
73. A loud classroom demonstration involves igniting a hydrogen-filled balloon. The hydrogen within the balloon reacts explosively with oxygen in the air to form water. If the balloon is

filled with a mixture of hydrogen and oxygen, the explosion is even louder than if the balloon is filled only with hydrogen—the intensity of the explosion depends on the relative amounts of oxygen and hydrogen within the balloon. Look at the molecular views representing different amounts of hydrogen and oxygen in four different balloons. Based on the balanced chemical equation, which balloon will make the loudest explosion? (*Hint:* Write a balanced equation for the chemical reaction first.)



74. The nitrogen in sodium nitrate and in ammonium sulfate is available to plants as fertilizer. Which is the more economical source of nitrogen, a fertilizer containing 30.0% sodium nitrate by weight and costing \$9.00 per 100 lb or one containing 20.0% ammonium sulfate by weight and costing \$8.10 per 100 lb?
75. The reaction of NH_3 and O_2 forms NO and water. The NO can be used to convert P_4 to P_4O_6 , forming N_2 in the process. The P_4O_6 can be treated with water to form H_3PO_3 , which forms PH_3 and H_3PO_4 when heated. Find the mass of PH_3 that forms from the reaction of 1.00 g NH_3 .
76. An important reaction that takes place in a blast furnace during the production of iron is the formation of iron metal and CO_2 from Fe_2O_3 and CO. Determine the mass of Fe_2O_3 required to form 910 kg of iron. Determine the amount of CO_2 that forms in this process.

77. A liquid fuel mixture contains 30.35% hexane (C_6H_{14}) and 15.85% heptane (C_7H_{16}). The remainder is octane (C_8H_{18}). What maximum mass of carbon dioxide is produced by the complete combustion of 10.0 kg of this fuel mixture?
78. Titanium occurs in the magnetic mineral ilmenite (FeTiO_3), which is often found mixed with sand. The ilmenite can be separated from the sand with magnets. The titanium can then be extracted from the ilmenite by the following set of reactions:



Suppose that an ilmenite–sand mixture contains 22.8% ilmenite by mass and that the first reaction is carried out with a 90.8% yield. If the second reaction is carried out with an 85.9% yield, what mass of titanium can we obtain from 1.00 kg of the ilmenite–sand mixture?

CHALLENGE PROBLEMS

79. A mixture of C_3H_8 and C_2H_2 has a mass of 2.0 g. It is burned in excess O_2 to form a mixture of water and carbon dioxide that contains 1.5 times as many moles of CO_2 as of water. Find the mass of C_2H_2 in the original mixture.
80. A mixture of 20.6 g of P and 79.4 g Cl_2 reacts completely to form PCl_3 and PCl_5 , which are the only products. Determine the mass of PCl_3 that forms.
81. Lead poisoning is a serious condition resulting from the ingestion of lead in food, water, or other environmental sources. It affects the central nervous system, leading to a variety of symptoms such as distractibility, lethargy, and loss of motor coordination. Lead poisoning is treated with chelating agents, substances that bind to metal ions, allowing them to be eliminated in the urine. A modern chelating agent used for this purpose is succimer ($\text{C}_4\text{H}_6\text{O}_4\text{S}_2$). Suppose you are trying to determine the appropriate dose for succimer treatment of lead poisoning. What minimum mass of succimer (in mg) is needed to bind all of the lead in a patient's bloodstream? Assume that patient blood lead levels are $45 \mu\text{g}/\text{dL}$, that total blood volume is 5.0 L, and that one mole of succimer binds one mole of lead.
82. A particular kind of emergency breathing apparatus—often placed in mines, caves, or other places where oxygen might

become depleted or where the air might become poisoned—works via the following chemical reaction:

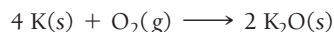


Notice that the reaction produces O_2 , which can be breathed, and absorbs CO_2 , a product of respiration. Suppose you work for a company interested in producing a self-rescue breathing apparatus (based on the above reaction) that would allow the user to survive for 10 minutes in an emergency situation. What are the important chemical considerations in designing such a unit? Estimate how much KO_2 would be required for the apparatus. (Find any necessary additional information—such as human breathing rates—from appropriate sources. Assume that normal air is 20% oxygen.)

83. Metallic aluminum reacts with MnO_2 at elevated temperatures to form manganese metal and aluminum oxide. A mixture of the two reactants is 67.2% mole percent Al. Determine the theoretical yield (in grams) of manganese from the reaction of 250 g of this mixture.
84. Hydrolysis of the compound B_5H_9 forms boric acid, H_3BO_3 . Fusion of boric acid with sodium oxide forms a borate salt, $\text{Na}_2\text{B}_4\text{O}_7$. Without writing complete equations, find the mass (in grams) of B_5H_9 required to form 151 g of the borate salt by this reaction sequence.


CONCEPTUAL PROBLEMS

85. Consider the reaction:



The molar mass of K is 39.09 g/mol and that of O_2 is 32.00 g/mol. Without doing any calculations, choose the conditions under which potassium is the limiting reactant and explain your reasoning.

- 170 g K, 31 g O_2
 - 16 g K, 2.5 g O_2
 - 165 kg K, 28 kg O_2
 - 1.5 g K, 0.38 g O_2
86. Consider the reaction:



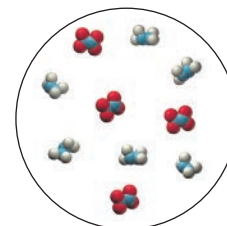
A reaction mixture initially contains 5 moles of NO and 10 moles of H_2 . Without doing any calculations, determine which set of amounts best represents the mixture after the reactants have reacted as completely as possible. Explain your reasoning.

- 1 mol NO, 0 mol H_2 , 4 mol NH_3 , 4 mol H_2O
- 0 mol NO, 1 mol H_2 , 5 mol NH_3 , 5 mol H_2O
- 3 mol NO, 5 mol H_2 , 2 mol NH_3 , 2 mol H_2O
- 0 mol NO, 0 mol H_2 , 4 mol NH_3 , 4 mol H_2O

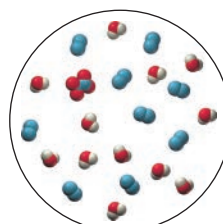
87. Consider the reaction:



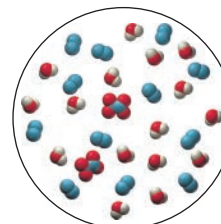
Consider also this representation of an initial mixture of N_2H_4 and N_2O_4 :



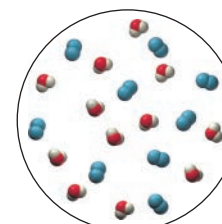
Which diagram best represents the reaction mixture after the reactants have reacted as completely as possible? (Hint: Begin by determining the limiting reactant.)



a.



b.



c.

QUESTIONS FOR GROUP WORK

Active Classroom Learning

Discuss these questions with the group and record your consensus answer.

88. Octane (C_8H_{18}), a component of gasoline, reacts with oxygen to form carbon dioxide and water. Write the balanced chemical reaction for this process by passing a single piece of paper around your group and asking each group member to complete the next logical step. As you each complete your step, explain your reasoning to the group.
89. Imagine you mix 16.05 g of methane (CH_4) gas and 96.00 g of oxygen (O_2) gas and then ignite the mixture. After a bright flash and a loud bang, some water droplets form on the inside of the reaction vessel.

- a. Write the balanced chemical reaction for the combustion of methane.
- b. Sketch the process that occurred in the vessel using circles to represent atoms. Represent carbon with black circles, hydrogen with white circles, and oxygen with red circles. Let one circle (or one molecule made of circles bonded together) represent exactly one mole.
- c. How many moles of water can you make? How many moles of carbon dioxide?
- d. Will anything be left over? What? How much?
- e. Identify the following: limiting reactant, reactant in excess, and theoretical yield.

DATA INTERPRETATION AND ANALYSIS

90. A chemical reaction in which reactants A and B form the product C is studied in the laboratory. The researcher carries out the reaction with differing relative amounts of reactants and measures the amount of product produced. Examine the given tabulated data from the experiment and answer the questions.

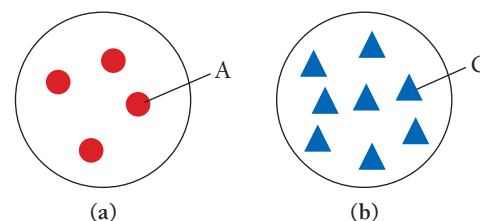
Experiment #	Mass A (g)	Mass B (g)	Mass C Obtained (g)
1	2.51	7.54	3.76
2	5.03	7.51	7.43
3	7.55	7.52	11.13
4	12.53	7.49	14.84
5	15.04	7.47	14.94
6	19.98	7.51	15.17
7	20.04	9.95	19.31
8	20.02	12.55	24.69

- a. For which experiments is A the limiting reactant?
- b. For which experiments is B the limiting reactant?
- c. The molar mass of A is 50.0 g/mol, and the molar mass of B is 75.0 g/mol. What are the coefficients of A and B in the balanced chemical equation?
- d. For each of the experiments in which A is the limiting reactant, calculate the mass of B remaining after the reaction has gone to completion. Use the molar masses and coefficients from part c.
- e. The molar mass of C is 88.0 g/mol. What is the coefficient of C in the balanced chemical equation?
- f. Calculate an average percent yield for the reaction.

ANSWERS TO CONCEPTUAL CONNECTIONS

- Cc 7.1 (b) The burning of lamp oil is like the burning of gasoline. The lamp oil is transformed into other substances (primarily carbon dioxide and water). The evaporation of rubbing alcohol and the formation of frost are both changes of state and therefore physical changes.
- Cc 7.2 View (a) best represents the water after vaporization. Vaporization is a physical change, so the molecules remain the same before and after the change.
- Cc 7.3 Both (a) and (d) are correct. When the number of atoms of each type is balanced, the sum of the masses of the substances involved will be the same on both sides of the equation. Since molecules change during a chemical reaction, their number is not the same on both sides, nor is the number of moles necessarily the same.
- Cc 7.4 Image (c) is the best representation because each O_2 molecule reacts with 4 Na atoms; 12 Na atoms are required to react with 3 O_2 molecules.

Cc 7.5



- Cc 7.6 Image (c) best represents the mixture. Nitrogen is the limiting reactant, and there is enough nitrogen to make 4 NH_3 molecules. Hydrogen is in excess, and 2 hydrogen molecules remain after the reactants have reacted as completely as possible.
- Cc 7.7 The limiting reactant is the H_2O , which is completely consumed. The 1 mol of H_2O requires 3 mol of NO_2 to completely react; therefore, 2 mol NO_2 remain after the reaction is complete.

8.1 Molecular Gastronomy 319

8.2 Solution Concentration 320

8.3 Solution Stoichiometry 325

8.4 Types of Aqueous Solutions and Solubility 326

8.5 Precipitation Reactions 331

8.6 Representing Aqueous Reactions: Molecular, Ionic, and Complete Ionic Equations 336

8.7 Acid–Base Reactions 337

8.8 Gas–Evolution Reactions 346

8.9 Oxidation–Reduction Reactions 347

Key Learning Outcomes 357



The spherical olive is a creation of the style of cuisine known as molecular gastronomy.

CHAPTER

8

Introduction to Solutions and Aqueous Reactions

YOU HAVE NOW LEARNED how to represent a chemical reaction, the process by which substances transform to other substances. In this chapter, we turn our attention to chemical reactions that occur in water. You have probably witnessed many of these types of reactions in your daily life because they are so common. Have you ever mixed baking soda with vinegar and observed the subsequent bubbling, or noticed the hard-water deposits that form on plumbing fixtures? These reactions—and many others, including those that occur within the watery environment of living cells—are aqueous chemical reactions, the subject of this chapter.

“Science may be described as the art of systematic oversimplification—the art of discerning what we may with advantage omit.”

—Karl Popper (1902–1994)

8.1 Molecular Gastronomy

On July 30, 2011, one of the most famous restaurants in the world—which boasted over one million reservation requests per year for a mere 8000 available spots—shut down. The restaurant, located on the coast north of Barcelona, Spain, was called elBulli, and it made the combination of chemistry and cooking famous. The style of cuisine practiced by the chefs at elBulli, which relies heavily on chemical processes, is often called *molecular gastronomy*.

A common chemical reaction in molecular gastronomy is precipitation. In a *precipitation reaction*, two *solutions*—homogeneous mixtures often containing a solid dissolved in a liquid—are mixed. Upon mixing, a solid forms. For example, when we mix a solution of lead(II) nitrate with potassium iodide, a brilliant yellow solid forms (see Section 8.4). The solid is lead(II) iodide.

In molecular gastronomy, chefs use a similar precipitation reaction—called *spherification*—to encapsulate liquids. One of the most famous creations at elBulli is the spherical olive (**Figure 8.1** ▶). To make a spherical olive, chefs take juice from real olives and mix it with a calcium salt (such as calcium chloride), which dissolves in the olive juice. They then carefully pour the olive juice into a bath of sodium alginate. Sodium alginate is a sodium salt that dissolves into water, resulting in the presence of alginate ions. When the calcium ions in the olive juice



▲ FIGURE 8.1 The Spherical Olive The spherical olive is made by precipitating an encapsulating layer around olive juice.

encounter the alginate ions in the bath, a precipitation reaction occurs. In this case, the precipitation reaction forms an encapsulating sphere around the juice. The result is a spherical, edible “olive” that pops in the mouth and releases its juice.

In this chapter, we explore solutions, focusing especially on *aqueous* solutions (solutions in which one component is water). The olive juice and calcium chloride mixture just discussed is an example of an aqueous solution. Other common aqueous solutions include seawater, vinegar, and the watery environment within biological cells. We will also explore the chemical reactions that occur within solutions, such as precipitation reactions, which have many common applications.

8.2 Solution Concentration

A homogeneous mixture of two substances—such as salt and water—is a **solution**. The major component of the mixture is the **solvent**, and the minor component is the **solute**. An **aqueous solution** is one in which water acts as the solvent. In this section, we examine how to quantify the concentration of a solution (the amount of solute relative to solvent), how to carry out calculations involving the concentration, and how to calculate the effects of diluting a solution.

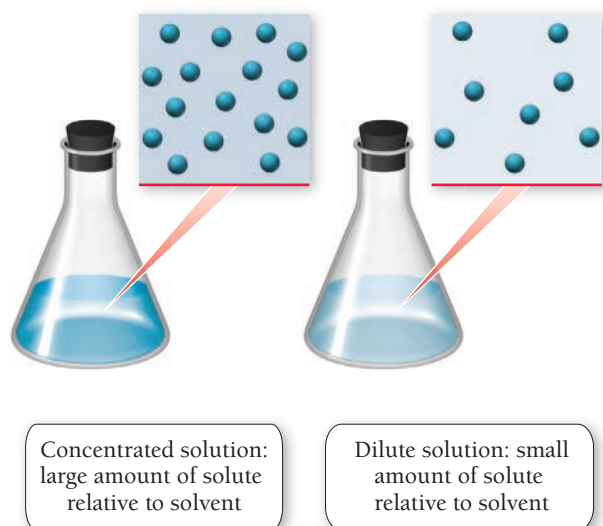
Quantifying Solution Concentration

The amount of solute in a solution is variable. For example, we can add just a little salt to water to make a **dilute solution**, one that contains a small amount of solute relative to the solvent, or we can add a lot of salt to water to make a **concentrated solution**, one that contains a large amount of solute relative to the solvent (**Figure 8.2 ▼**). A common way to express solution concentration is **molarity (M)**, the amount of solute (in moles) divided by the volume of solution (in liters).

$$\text{molarity (M)} = \frac{\text{amount of solute (in mol)}}{\text{volume of solution (in L)}}$$

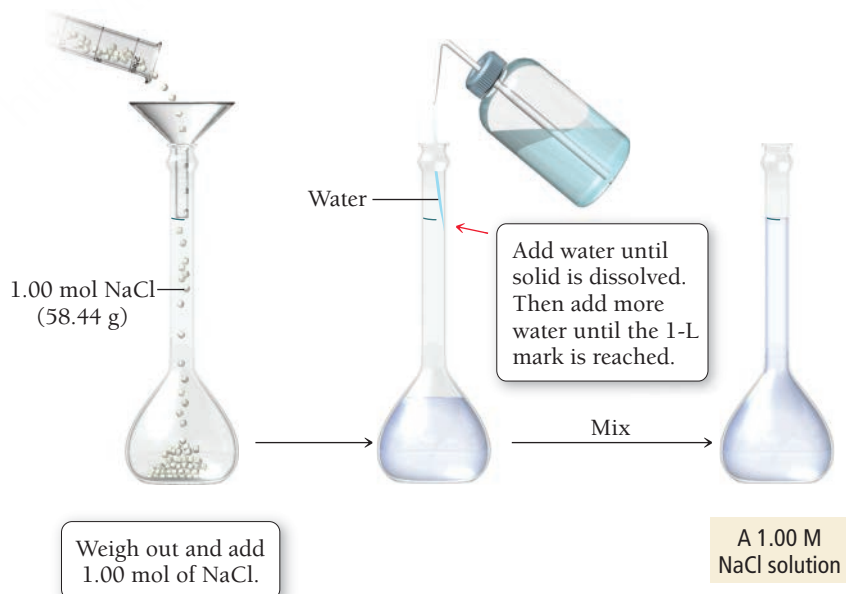
Notice that molarity is a ratio of the amount of solute per liter of *solution*, not per liter of solvent. To make an aqueous solution of a specified molarity, we usually put the solute into a flask and then add water to reach the desired volume of solution. For example, to make 1 L of a 1 M NaCl solution, we add 1 mol of NaCl to a flask and then add enough water to make 1 L of solution (**Figure 8.3 ▼**).

Concentrated and Dilute Solutions



▲ **FIGURE 8.2** Concentrated and Dilute Solutions

Preparing a Solution of Specified Concentration



▲ **FIGURE 8.3** Preparing a 1.00 M NaCl Solution

We *do not* combine 1 mol of NaCl with 1 L of water because the resulting solution would have a total volume exceeding 1 L and therefore a molarity of less than 1 M. To calculate molarity, we divide the amount of the solute in moles by the volume of the solution (solute *and* solvent) in liters, as shown in Example 8.1.

EXAMPLE 8.1

Calculating Solution Concentration

Interactive
Worked Example
Video 8.1

PEARSON
eText
2.0

If you dissolve 25.5 g KBr in enough water to make 1.75 L of solution, what is the molarity of the solution?

<p>SORT You are given the mass of KBr and the volume of a solution and asked to find its molarity.</p>	<p>GIVEN: 25.5 g KBr, 1.75 L of solution FIND: molarity (M)</p>
<p>STRATEGIZE When formulating the conceptual plan, think about the definition of molarity: the amount of solute <i>in moles</i> per <i>liter of solution</i>. You are given the mass of KBr, so first use the molar mass of KBr to convert from g KBr to mol KBr.</p> <p>Then use the number of moles of KBr and liters of solution to find the molarity.</p>	<p>CONCEPTUAL PLAN</p> <div><div>g KBr</div>→<div>mol KBr</div><div>$\frac{1 \text{ mol}}{119.00 \text{ g}}$</div></div> <div><div>mol KBr, L solution</div>→<div>molarity</div><div>$\text{molarity (M)} = \frac{\text{amount of solute (in mol)}}{\text{volume of solution (in L)}}$</div></div> <p>RELATIONSHIPS USED molar mass of KBr = 119.00 g/mol</p>
<p>SOLVE Follow the conceptual plan. Begin with g KBr and convert to mol KBr; then use mol KBr and L solution to calculate molarity.</p>	<p>SOLUTION</p> $25.5 \text{ g-KBr} \times \frac{1 \text{ mol KBr}}{119.00 \text{ g-KBr}} = 0.21429 \text{ mol KBr}$ $\text{molarity (M)} = \frac{\text{amount of solute (in mol)}}{\text{volume of solution (in L)}}$ $= \frac{0.21429 \text{ mol KBr}}{1.75 \text{ L solution}}$ $= 0.122 \text{ M}$

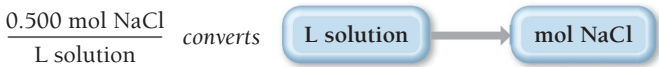
CHECK The units of the answer (M) are correct. The magnitude is reasonable since common solutions range in concentration from 0 to about 18 M. Concentrations significantly above 18 M are suspect and should be double-checked.

FOR PRACTICE 8.1
Calculate the molarity of a solution made by adding 45.4 g of NaNO₃ to a flask and dissolving it with water to create a total volume of 2.50 L.

FOR MORE PRACTICE 8.1
What mass of KBr (in grams) do you need to make 250.0 mL of a 1.50 M KBr solution?

Using Molarity in Calculations

We can use the molarity of a solution as a conversion factor between moles of the solute and liters of the solution. For example, a 0.500 M NaCl solution contains 0.500 mol NaCl for every liter of solution.



This conversion factor converts from L solution to mol NaCl. If we want to go the other way, we invert the conversion factor.



Example 8.2 illustrates how to use molarity in this way.

EXAMPLE 8.2

Using Molarity in Calculations

Interactive
Worked Example
Video 8.2



How many L of a 0.125 M NaOH solution contain 0.255 mol of NaOH?

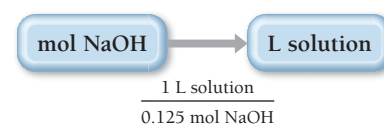
SORT You are given the concentration of an NaOH solution. You are asked to find the volume of the solution that contains a given amount (in moles) of NaOH.

STRATEGIZE The conceptual plan begins with mol NaOH and shows the conversion to L of solution using molarity as a conversion factor.

GIVEN: 0.125 M NaOH solution, 0.255 mol NaOH

FIND: volume of NaOH solution (in L)

CONCEPTUAL PLAN



RELATIONSHIPS USED

$$0.125 \text{ M NaOH} = \frac{0.125 \text{ mol NaOH}}{1 \text{ L solution}}$$

SOLVE Follow the conceptual plan. Begin with mol NaOH and convert to L solution.

SOLUTION

$$0.255 \text{ mol NaOH} \times \frac{1 \text{ L solution}}{0.125 \text{ mol NaOH}} = 2.04 \text{ L solution}$$

CHECK The units of the answer (L) are correct. The magnitude is reasonable because the solution contains 0.125 mol per L. Therefore, roughly 2 L contains the given amount of moles (0.255 mol).

FOR PRACTICE 8.2

How many grams of sucrose ($\text{C}_{12}\text{H}_{22}\text{O}_{11}$) are in 1.55 L of 0.758 M sucrose solution?

FOR MORE PRACTICE 8.2

How many mL of a 0.155 M KCl solution contains 2.55 g KCl?



8.1 Cc

Conceptual
Connection

Solutions

If we dissolve 25 g of salt in 251 g of water, what is the mass of the resulting solution?

- (a) 251 g (b) 276 g (c) 226 g

When diluting acids, always add the concentrated acid to the water. Never add water to concentrated acid solutions, as the heat generated may cause the concentrated acid to splatter and burn your skin.

Solution Dilution

To save space in storerooms, laboratories often store solutions in concentrated forms called **stock solutions**. For example, hydrochloric acid is frequently stored as a 12 M stock solution. However, many lab procedures call for much less concentrated hydrochloric acid solutions, so we must dilute the stock solution to the required concentration. How do we know how much of the stock solution to use? When we dilute a solution

by adding more solvent, the number of moles of solute do not change; the same number of moles are simply contained in a greater volume, which changes the concentration. Therefore, the most direct way to solve dilution problems is to use the following dilution equation:

$$M_1V_1 = M_2V_2 \quad [8.1]$$

where M_1 and V_1 are the molarity and volume of the initial concentrated solution, and M_2 and V_2 are the molarity and volume of the final diluted solution. This equation works because the molarity multiplied by the volume gives the number of moles of solute, which does not change upon dilution.

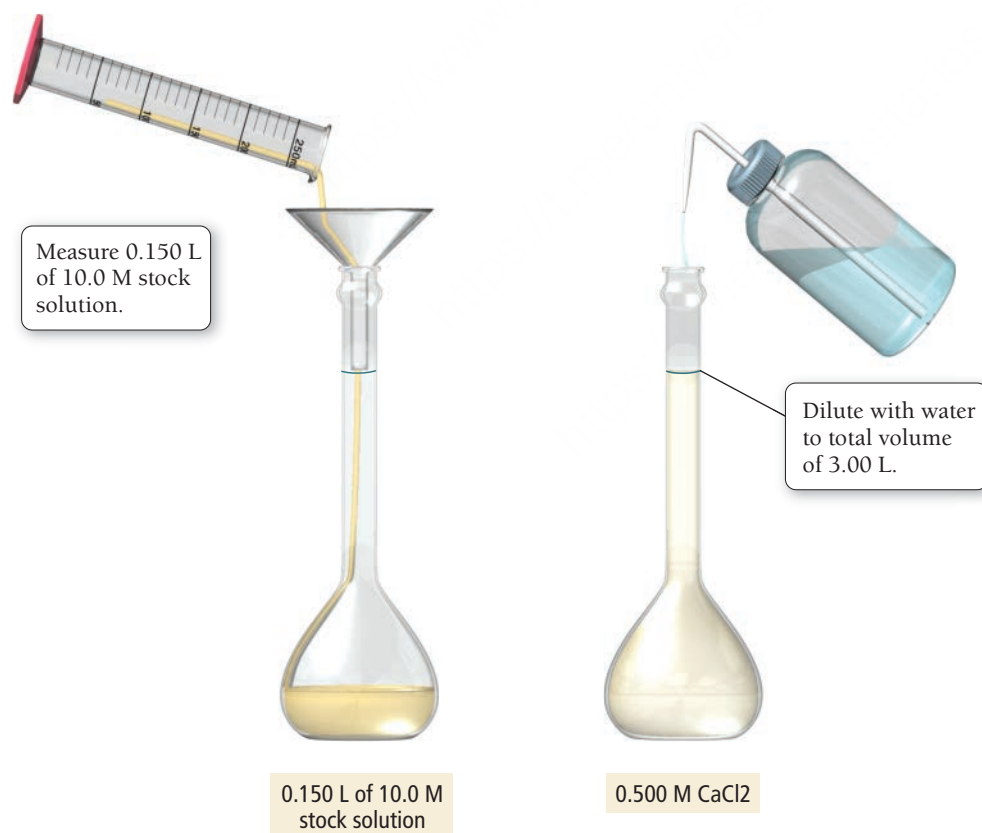
$$\begin{aligned} M_1V_1 &= M_2V_2 \\ \text{mol}_1 &= \text{mol}_2 \end{aligned}$$

For example, suppose a procedure for spherification (see Section 8.1) calls for 3.00 L of a 0.500 M CaCl_2 solution. How can we prepare this solution from a 10.0 M stock solution? We solve Equation 8.1 for V_1 , the volume of the stock solution required for the dilution, and then substitute in the correct values to calculate it.

$$\begin{aligned} M_1V_1 &= M_2V_2 \\ V_1 &= \frac{M_2V_2}{M_1} \\ &= \frac{0.500 \text{ mol/L} \times 3.00 \text{ L}}{10.0 \text{ mol/L}} \\ &= 0.150 \text{ L} \end{aligned}$$

We make the solution by diluting 0.150 L of the stock solution to a total volume of 3.00 L (V_2). The resulting solution is 0.500 M CaCl_2 (**Figure 8.4** ▼).

Diluting a Solution



$$\begin{aligned} M_1V_1 &= M_2V_2 \\ \frac{10.0 \text{ mol}}{\cancel{\text{L}}} \times 0.150 \cancel{\text{L}} &= \frac{0.500 \text{ mol}}{\cancel{\text{L}}} \times 3.00 \cancel{\text{L}} \\ 1.50 \text{ mol} &= 1.50 \text{ mol} \end{aligned}$$

◀ **FIGURE 8.4** Preparing 3.00 L of 0.500 M CaCl_2 from a 10.0 M Stock Solution

EXAMPLE 8.3

Solution Dilution

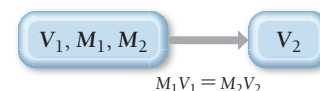
To what volume should you dilute 0.200 L of a 15.0 M NaOH solution to obtain a 3.00 M NaOH solution?

SORT You are given the initial volume, initial concentration, and final concentration of a solution, and you need to determine the final volume.

GIVEN: $V_1 = 0.200 \text{ L}$
 $M_1 = 15.0 \text{ M}$
 $M_2 = 3.00 \text{ M}$
FIND: V_2

STRATEGIZE Equation 8.1 relates the initial and final volumes and concentrations for solution dilution problems. You are asked to find V_2 . The other quantities (V_1 , M_1 , and M_2) are all given in the problem.

CONCEPTUAL PLAN



RELATIONSHIPS USED

$$M_1V_1 = M_2V_2$$

SOLVE Begin with the solution dilution equation and solve it for V_2 .

Substitute in the required quantities and calculate V_2 .

Make the solution by diluting 0.200 L of the stock solution to a total volume of 1.00 L (V_2). The resulting solution has a concentration of 3.00 M.

SOLUTION

$$\begin{aligned} M_1V_1 &= M_2V_2 \\ V_2 &= \frac{M_1V_1}{M_2} \\ &= \frac{15.0 \text{ mol/L} \times 0.200 \text{ L}}{3.00 \text{ mol/L}} \\ &= 1.00 \text{ L} \end{aligned}$$


CHECK The final units (L) are correct. The magnitude of the answer is reasonable because the solution is diluted from 15.0 M to 3.00 M, a factor of five. Therefore, the volume should increase by a factor of five.

FOR PRACTICE 8.3

To what volume (in mL) should you dilute 100.0 mL of a 5.00 M CaCl_2 solution to obtain a 0.750 M CaCl_2 solution?

FOR MORE PRACTICE 8.3

What volume of a 6.00 M NaNO_3 solution should you use to make 0.525 L of a 1.20 M NaNO_3 solution?

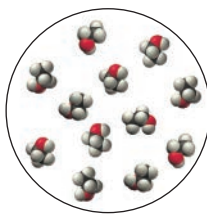
8.2
Cc

Conceptual
Connection

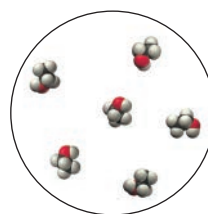
Solution Dilution

The image at right represents a small volume within 500 mL of aqueous ethanol ($\text{CH}_3\text{CH}_2\text{OH}$) solution. (The water molecules have been omitted for clarity.)

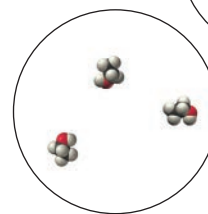
Which image best represents the same volume of the solution after we add an additional 500 mL of water?



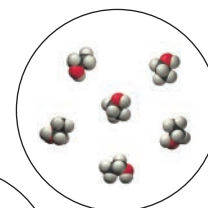
(a)



(b)



(c)



8.3 Solution Stoichiometry

In Section 7.4, we discussed how to use the coefficients in chemical equations as conversion factors between the amounts of reactants (in moles) and the amounts of products (in moles). In aqueous reactions, quantities of reactants and products are often specified in terms of volumes and concentrations. We can use the volume and concentration of a reactant or product to calculate its amount in moles. We can then use the stoichiometric coefficients in the chemical equation to convert to the amount in moles of another reactant or product. The general conceptual plan for these kinds of calculations begins with the volume of a reactant or product:



We make the conversions between solution volumes and amounts in moles of solute using the molarities of the solutions. We make the conversions between amounts in moles of A and B using the stoichiometric coefficients from the balanced chemical equation. Example 8.4 demonstrates solution stoichiometry.

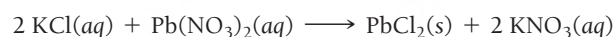
EXAMPLE 8.4

Solution Stoichiometry

Interactive
Worked Example
Video 8.4

PEARSON
eText
2.0

What volume (in L) of 0.150 M KCl solution will completely react with 0.150 L of a 0.175 M $\text{Pb}(\text{NO}_3)_2$ solution according to this balanced chemical equation?



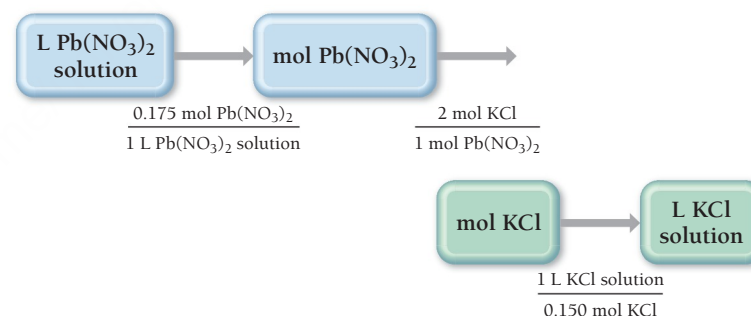
SORT You are given the volume and concentration of a $\text{Pb}(\text{NO}_3)_2$ solution. You are asked to find the volume of KCl solution (of a given concentration) required to react with it.

STRATEGIZE The conceptual plan has the form:
 volume A \longrightarrow amount A (in moles) \longrightarrow amount B (in moles) \longrightarrow volume B. Use the molar concentrations of the KCl and $\text{Pb}(\text{NO}_3)_2$ solutions as conversion factors between the number of moles of reactants in these solutions and their volumes. Use the stoichiometric coefficients from the balanced equation to convert between number of moles of $\text{Pb}(\text{NO}_3)_2$ and number of moles of KCl.

GIVEN: 0.150 L of $\text{Pb}(\text{NO}_3)_2$ solution, 0.175 M $\text{Pb}(\text{NO}_3)_2$ solution, 0.150 M KCl solution

FIND: volume KCl solution (in L)

CONCEPTUAL PLAN



RELATIONSHIPS USED

$$M [\text{Pb}(\text{NO}_3)_2] = \frac{0.175 \text{ mol Pb}(\text{NO}_3)_2}{1 \text{ L Pb}(\text{NO}_3)_2 \text{ solution}}$$

2 mol KCl : 1 mol $\text{Pb}(\text{NO}_3)_2$ (from chemical equation)

$$M [\text{KCl}] = \frac{0.150 \text{ mol KCl}}{1 \text{ L KCl solution}}$$

SOLVE Begin with L $\text{Pb}(\text{NO}_3)_2$ solution and follow the conceptual plan to arrive at L KCl solution.

SOLUTION

$$\begin{aligned}
 &0.150 \text{ L Pb}(\text{NO}_3)_2 \text{ solution} \times \frac{0.175 \text{ mol Pb}(\text{NO}_3)_2}{1 \text{ L Pb}(\text{NO}_3)_2 \text{ solution}} \\
 &\times \frac{2 \text{ mol KCl}}{1 \text{ mol Pb}(\text{NO}_3)_2} \times \frac{1 \text{ L KCl solution}}{0.150 \text{ mol KCl}} = 0.350 \text{ L KCl solution}
 \end{aligned}$$

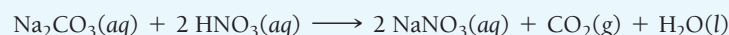
—Continued on the next page

Continued from the previous page—

CHECK The final units (L KCl solution) are correct. The magnitude (0.350 L) is reasonable because the reaction stoichiometry requires 2 mol of KCl per mole of $\text{Pb}(\text{NO}_3)_2$. Since the concentrations of the two solutions are not very different (0.150 M compared to 0.175 M), the volume of KCl required is roughly two times the 0.150 L of $\text{Pb}(\text{NO}_3)_2$ given in the problem.

FOR PRACTICE 8.4

What volume (in mL) of a 0.150 M HNO_3 solution will completely react with 35.7 mL of a 0.108 M Na_2CO_3 solution according to this balanced chemical equation?

**FOR MORE PRACTICE 8.4**

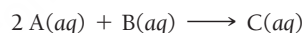
In the reaction in For Practice 8.4, what mass (in grams) of carbon dioxide forms?



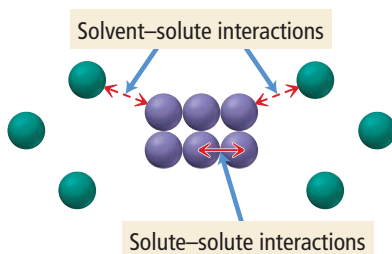
Conceptual Connection

8.3**Solution Stoichiometry**

Consider the reaction:

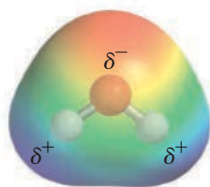


What is the limiting reactant if we mix equal volumes of a 1 M solution of A and a 1 M solution of B?

Solute and Solvent Interactions

▲ FIGURE 8.5 Solute and Solvent Interactions

Oxygen side has partial negative charge.



Hydrogen side has partial positive charge.

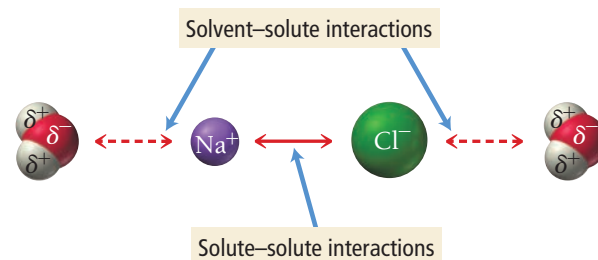
▲ FIGURE 8.6 Electrostatic Potential Map of a Water Molecule

8.4 Types of Aqueous Solutions and Solubility

Consider two familiar aqueous solutions: saltwater and sugar water. Saltwater is a homogeneous mixture of NaCl and H_2O , and sugar water is a homogeneous mixture of $\text{C}_{12}\text{H}_{22}\text{O}_{11}$ and H_2O . You may have made these solutions yourself by adding table salt or sugar to water. As you stir either of these two substances into the water, the substance seems to disappear. However, you know that the original substance is still present because you can taste saltiness or sweetness in the water. How do solids such as salt and sugar dissolve in water?

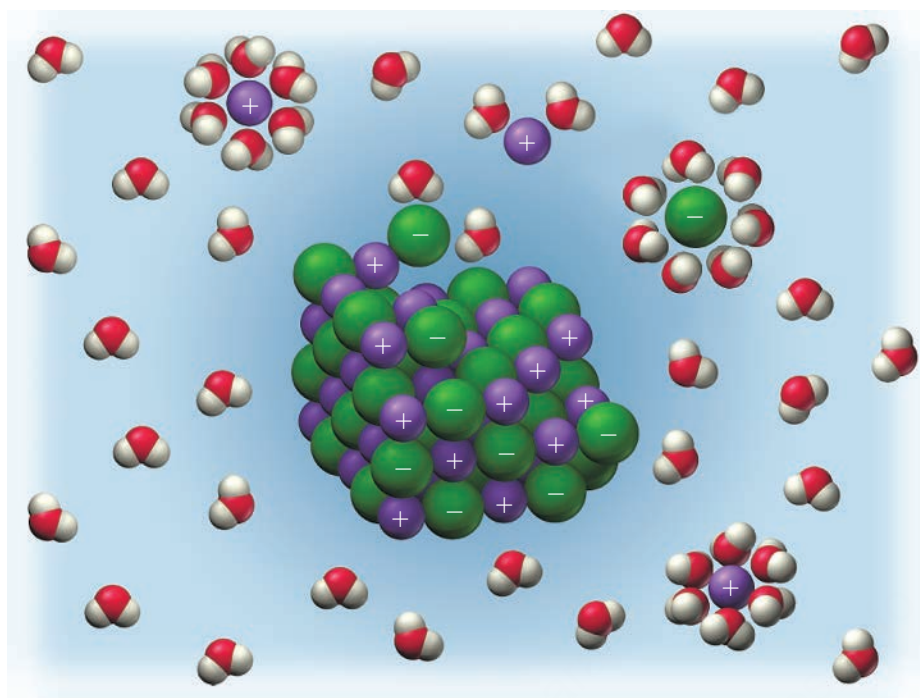
When we put a solid into a liquid solvent, the attractive forces that hold the solid together (the solute–solute interactions) compete with the attractive forces between the solvent molecules and the particles that compose the solid (the solvent–solute interactions), as shown in **Figure 8.5** ◀.

For example, when we add sodium chloride to water, there is a competition between the attraction of Na^+ cations and Cl^- anions to each other (due to their opposite charges) and the attraction of Na^+ and Cl^- to water molecules. The attraction of Na^+ and Cl^- to water is based on the *polar nature* of the water molecule (see Section 5.10). The oxygen atom in water is electron-rich, giving it a partial negative charge (δ^-), as shown in **Figure 8.6** ◀. The hydrogen atoms, in contrast, are electron-poor, giving them a partial positive charge (δ^+). As a result, the positively charged sodium ions are strongly attracted to the oxygen side of the water molecule, and the negatively charged chloride ions are attracted to the hydrogen side of the water molecule, as shown in **Figure 8.7** ▼. In the case of NaCl , the attraction between the separated ions and the water molecules overcomes the attraction of sodium and chloride ions to each other, and the sodium chloride dissolves in the water (**Figure 8.8** ►).

Interactions in a Sodium Chloride Solution

◀ FIGURE 8.7 Solute and Solvent Interactions in a Sodium Chloride Solution When sodium chloride is put into water, the attraction of Na^+ and Cl^- ions to water molecules competes with the attraction among the oppositely charged ions themselves.

Dissolution of an Ionic Compound

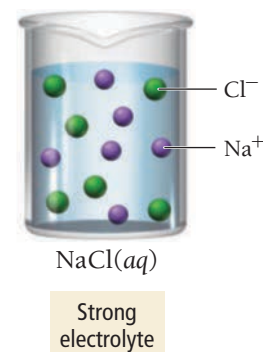


Water-ion attractions dissolve sodium chloride.

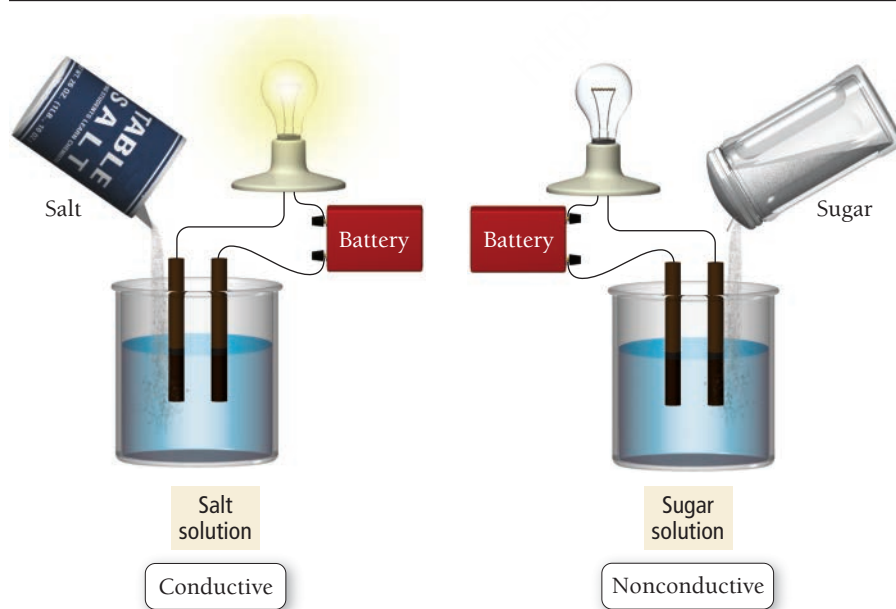
◀ **FIGURE 8.8** Sodium Chloride Dissolving in Water

Electrolyte and Nonelectrolyte Solutions

As **Figure 8.9** illustrates, a salt solution conducts electricity while a sugar solution does not. The difference between the way that salt (an ionic compound) and sugar (a molecular compound) dissolve in water illustrates a fundamental difference between types of solutions. Ionic compounds such as the sodium chloride in the previous example (or the calcium chloride used for spherification in molecular gastronomy discussed in Section 8.1), dissociate into their component ions when they dissolve in water. An NaCl solution, represented as $\text{NaCl}(aq)$, does not contain any NaCl units, but rather dissolved Na^+ ions and Cl^- ions.



Electrolyte and Nonelectrolyte Solutions

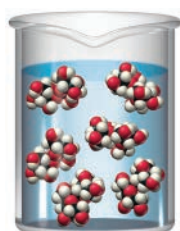


◀ **FIGURE 8.9** Electrolyte and Nonelectrolyte Solutions A solution of salt (an electrolyte) conducts electrical current. A solution of sugar (a nonelectrolyte) does not.

The dissolved ions act as charge carriers, allowing the solution to conduct electricity. Substances that dissolve in water to form solutions that conduct electricity are **electrolytes**. Substances such as sodium chloride that completely dissociate into ions when they dissolve in water are **strong electrolytes**, and the resulting solutions are strong electrolyte solutions.

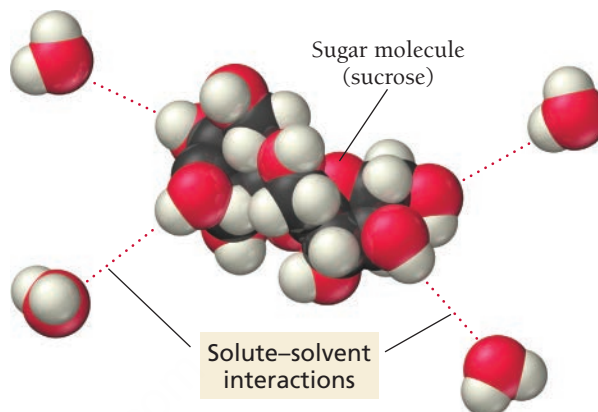
► **FIGURE 8.10 Sugar and Water Interactions**

Partial charges on sugar molecules and water molecules (discussed more fully in Chapter 13) result in attractions between the sugar molecules and water molecules.



Nonelectrolyte

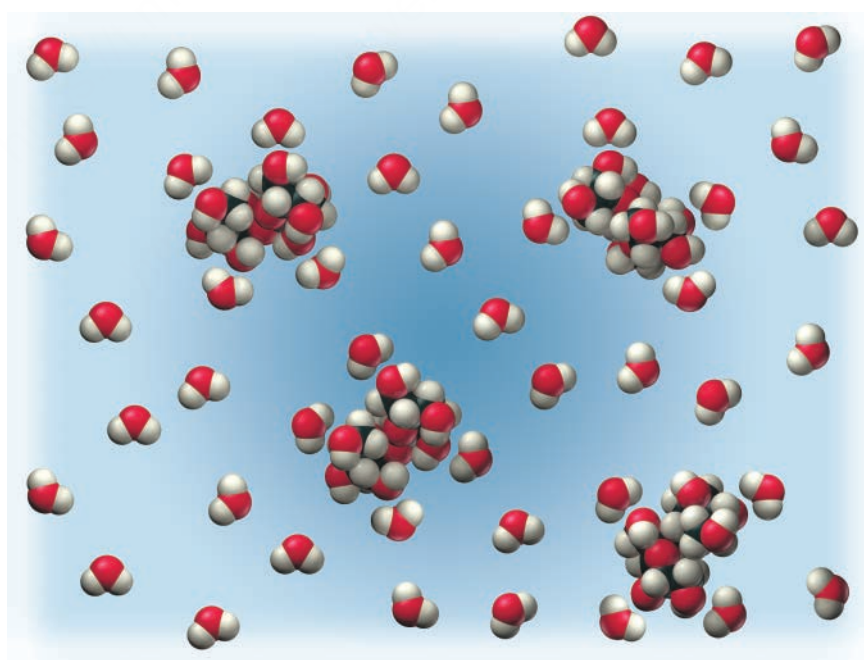
Interactions between Sugar and Water Molecules



In contrast to sodium chloride, sugar is a molecular compound. Most molecular compounds—with the important exception of acids, which we discuss shortly—dissolve in water as intact molecules. Sugar dissolves because the attraction between sugar molecules and water molecules, shown in **Figure 8.10** ▲, overcomes the attraction of sugar molecules to each other (**Figure 8.11** ▼). So unlike a sodium chloride solution (which is composed of dissociated ions), a sugar solution is composed of intact $\text{C}_{12}\text{H}_{22}\text{O}_{11}$ molecules homogeneously mixed with the water molecules.

Compounds such as sugar that do not dissociate into ions when dissolved in water are **nonelectrolytes**, and the resulting solutions—called *nonelectrolyte solutions*—do not conduct electricity.

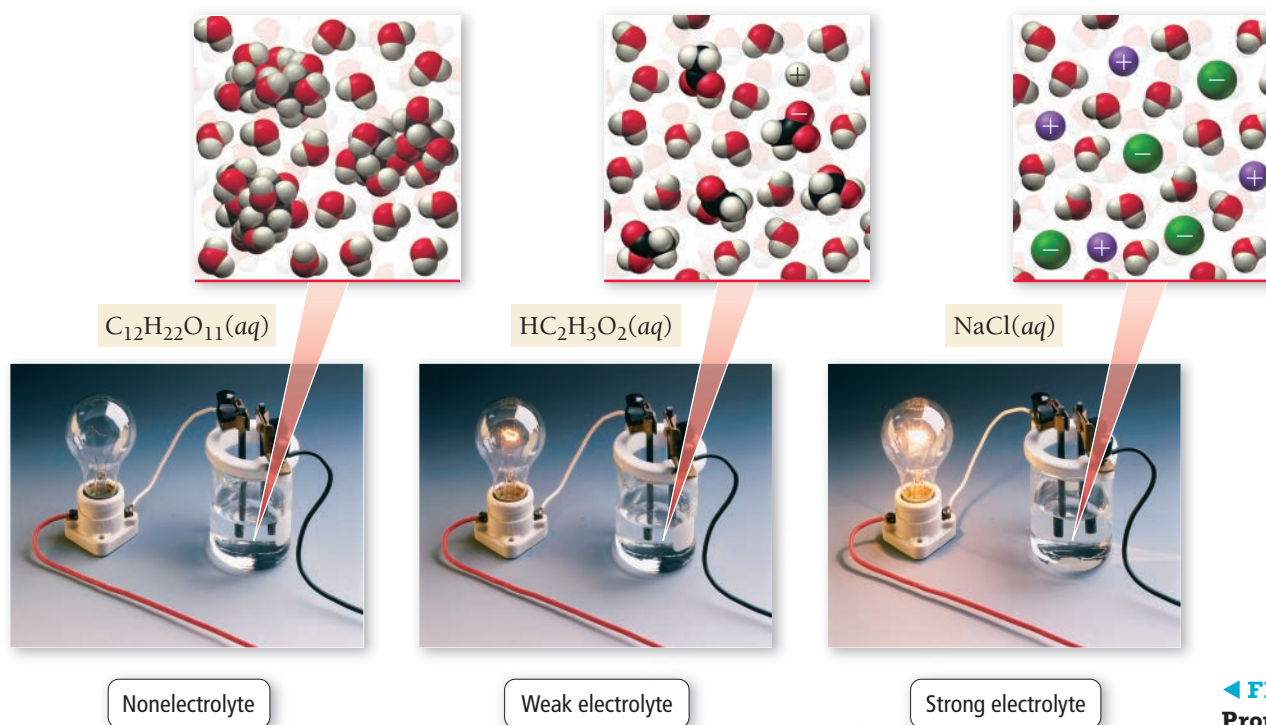
Sugar Solution



Attractions between sugar molecules and water molecules overcome the attractions between sugar molecules.

► **FIGURE 8.11 A Sugar Solution**

Electrolytic Properties of Solutions



◀ **FIGURE 8.12** Electrolytic Properties of Solutions

Acids are molecular compounds that ionize to form H^+ ions when they dissolve in water. Hydrochloric acid (HCl), for example, ionizes into H^+ and Cl^- when it dissolves in water. HCl is an example of a **strong acid**, one that completely ionizes in solution. Since strong acids completely ionize in solution, they are also strong electrolytes. We represent the complete ionization of a strong acid with a single reaction arrow between the acid and its ionized form:



Many acids are **weak acids**; they do not completely ionize in water. For example, acetic acid ($\text{HC}_2\text{H}_3\text{O}_2$), the acid in vinegar, is a weak acid. A solution of a weak acid is composed mostly of the non-ionized acid—only a small percentage of the acid molecules ionize. We represent the partial ionization of a weak acid with opposing half arrows between the reactants and products:

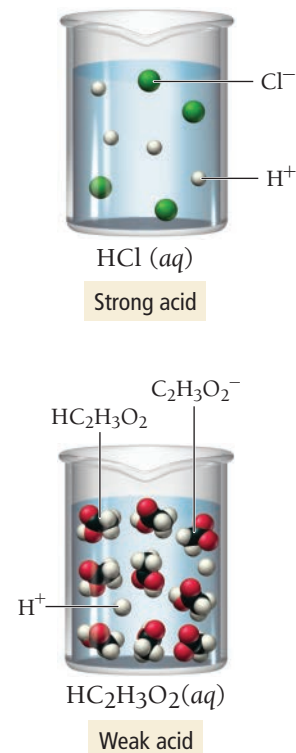


Weak acids are **weak electrolytes**, and the resulting solutions—called *weak electrolyte solutions*—conduct electricity only weakly. **Figure 8.12** ▲ summarizes the electrolytic properties of solutions.

The Solubility of Ionic Compounds

As we have just discussed, when an ionic compound dissolves in water, the resulting solution contains, not the intact ionic compound itself, but its component ions dissolved in water. However, not all ionic compounds dissolve in water. If we add AgCl to water, for example, it remains solid and appears as a white powder at the bottom of the water.

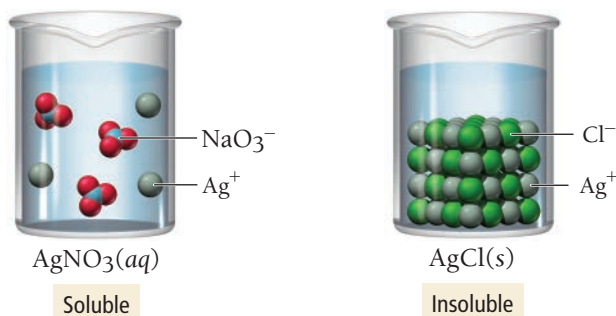
In general, a compound is termed **soluble** if it dissolves in water and **insoluble** if it does not. However, these classifications are a bit of an oversimplification. In reality, solubility is a continuum and even “insoluble” compounds dissolve to some extent, though usually orders of magnitude less than soluble compounds. Nonetheless, this oversimplification is useful in allowing us to systematically categorize a large number of compounds. (See Karl Popper’s quote at the beginning of this chapter.)





▲ AgCl does not dissolve in water; it remains as a white powder at the bottom of the beaker.

As an example, consider silver nitrate, which is soluble. If we mix solid AgNO_3 with water, it dissolves and forms a strong electrolyte solution. Silver chloride, on the other hand, is almost completely insoluble. If we mix solid AgCl with water, virtually all of it remains as a solid within the liquid water.



Whether a particular compound is soluble or insoluble depends on several factors. In Section 13.3, we will examine more closely the energy changes associated with solution formation. For now, however, we can follow a set of empirical rules that chemists have inferred from observations on many ionic compounds. Table 8.1 summarizes these *solubility rules*.

The solubility rules state that compounds containing the sodium ion are soluble. That means that compounds such as NaBr , NaNO_3 , Na_2SO_4 , NaOH , and Na_2CO_3 all dissolve in water to form strong electrolyte solutions. Similarly, the solubility rules state that compounds containing the NO_3^- ion are soluble. That means that compounds such as AgNO_3 , $\text{Pb}(\text{NO}_3)_2$, NaNO_3 , $\text{Ca}(\text{NO}_3)_2$, and $\text{Sr}(\text{NO}_3)_2$ all dissolve in water to form strong electrolyte solutions. Notice that when compounds containing polyatomic ions such as NO_3^- dissolve, the polyatomic ions remain as intact units.

The solubility rules also state that, with some exceptions, compounds containing the CO_3^{2-} ion are insoluble. Therefore, compounds such as CuCO_3 , CaCO_3 , SrCO_3 , and FeCO_3 do not dissolve in water. Note that the solubility rules contain many exceptions. For example, compounds containing CO_3^{2-} are soluble when paired with Li^+ , Na^+ , K^+ , or NH_4^+ . Thus Li_2CO_3 , Na_2CO_3 , K_2CO_3 , and $(\text{NH}_4)_2\text{CO}_3$ are all soluble.

TABLE 8.1 Solubility Rules for Ionic Compounds in Water

Compounds Containing the Following Ions Are Generally Soluble	Exceptions
Li^+ , Na^+ , K^+ , and NH_4^+	None
NO_3^- and $\text{C}_2\text{H}_3\text{O}_2^-$	None
Cl^- , Br^- , and I^-	When these ions pair with Ag^+ , Hg_2^{2+} , or Pb^{2+} , the resulting compounds are insoluble.
SO_4^{2-}	When SO_4^{2-} pairs with Sr^{2+} , Ba^{2+} , Pb^{2+} , Ag^+ , or Ca^{2+} , the resulting compound is insoluble.
Compounds Containing the Following Ions Are Generally Insoluble	Exceptions
OH^- and S^{2-}	When these ions pair with Li^+ , Na^+ , K^+ , or NH_4^+ , the resulting compounds are soluble.
	When S^{2-} pairs with Ca^{2+} , Sr^{2+} , or Ba^{2+} , the resulting compound is soluble.
	When OH^- pairs with Ca^{2+} , Sr^{2+} , or Ba^{2+} , the resulting compound is slightly soluble.
CO_3^{2-} and PO_4^{3-}	When these ions pair with Li^+ , Na^+ , K^+ , or NH_4^+ , the resulting compounds are soluble.

EXAMPLE 8.5**Predicting Ionic Compound Solubility**

Predict whether each compound is soluble or insoluble.

- (a) PbCl_2 (b) CuCl_2 (c) $\text{Ca}(\text{NO}_3)_2$ (d) BaSO_4

SOLUTION

- (a) Insoluble. Compounds containing Cl^- are normally soluble but Pb^{2+} is an exception.
 (b) Soluble. Compounds containing Cl^- are normally soluble and Cu^{2+} is not an exception.
 (c) Soluble. Compounds containing NO_3^- are always soluble.
 (d) Insoluble. Compounds containing SO_4^{2-} are normally soluble but Ba^{2+} is an exception.

FOR PRACTICE 8.5

Predict whether each compound is soluble or insoluble.

- (a) NiS (b) $\text{Mg}_3(\text{PO}_4)_2$ (c) Li_2CO_3 (d) NH_4Cl

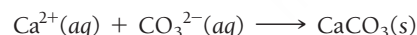
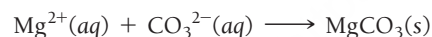
8.5 Precipitation Reactions

We discussed an example of a **precipitation reaction**—a reaction in which a solid forms upon the mixing of two solutions—in Section 8.1. You have probably seen another precipitation reaction if you have taken a bath in hard water. Hard water contains dissolved ions such as Ca^{2+} and Mg^{2+} that form a **precipitate** when they react with ions in soap. This precipitate is a gray curd that may appear as “bathtub ring” after you drain the tub.

Hard water is particularly troublesome when washing clothes. Consider how your white shirt would look covered with the gray curd from the bathtub. Most laundry detergents include substances designed to remove Ca^{2+} and Mg^{2+} from the laundry mixture. The most common substance used for this purpose is sodium carbonate, which dissolves in water to form sodium cations (Na^+) and carbonate (CO_3^{2-}) anions:

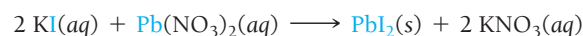


Sodium carbonate is soluble, but calcium carbonate and magnesium carbonate are not (see the solubility rules in Table 8.1). Consequently, the carbonate anions react with dissolved Mg^{2+} and Ca^{2+} ions in hard water to form solids *that precipitate* from (or come out of) solution:

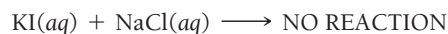


The precipitation of these ions prevents their reaction with the soap, eliminating curd and preventing white shirts from turning gray.

The reactions between CO_3^{2-} and Mg^{2+} and Ca^{2+} are also examples of precipitation reactions. Precipitation reactions are common in chemistry. Potassium iodide and lead(II) nitrate, which each form colorless, strong electrolyte solutions when dissolved in water, form a brilliant yellow precipitate when combined (**Figure 8.13** ►, on the next page). We describe this precipitation reaction with the following chemical equation:



Precipitation reactions do not always occur when two aqueous solutions are mixed. For example, if we combine solutions of $\text{KI}(aq)$ and $\text{NaCl}(aq)$, nothing happens (**Figure 8.14** ►, on page 233):



KEY CONCEPT VIDEO
Reactions in Solution

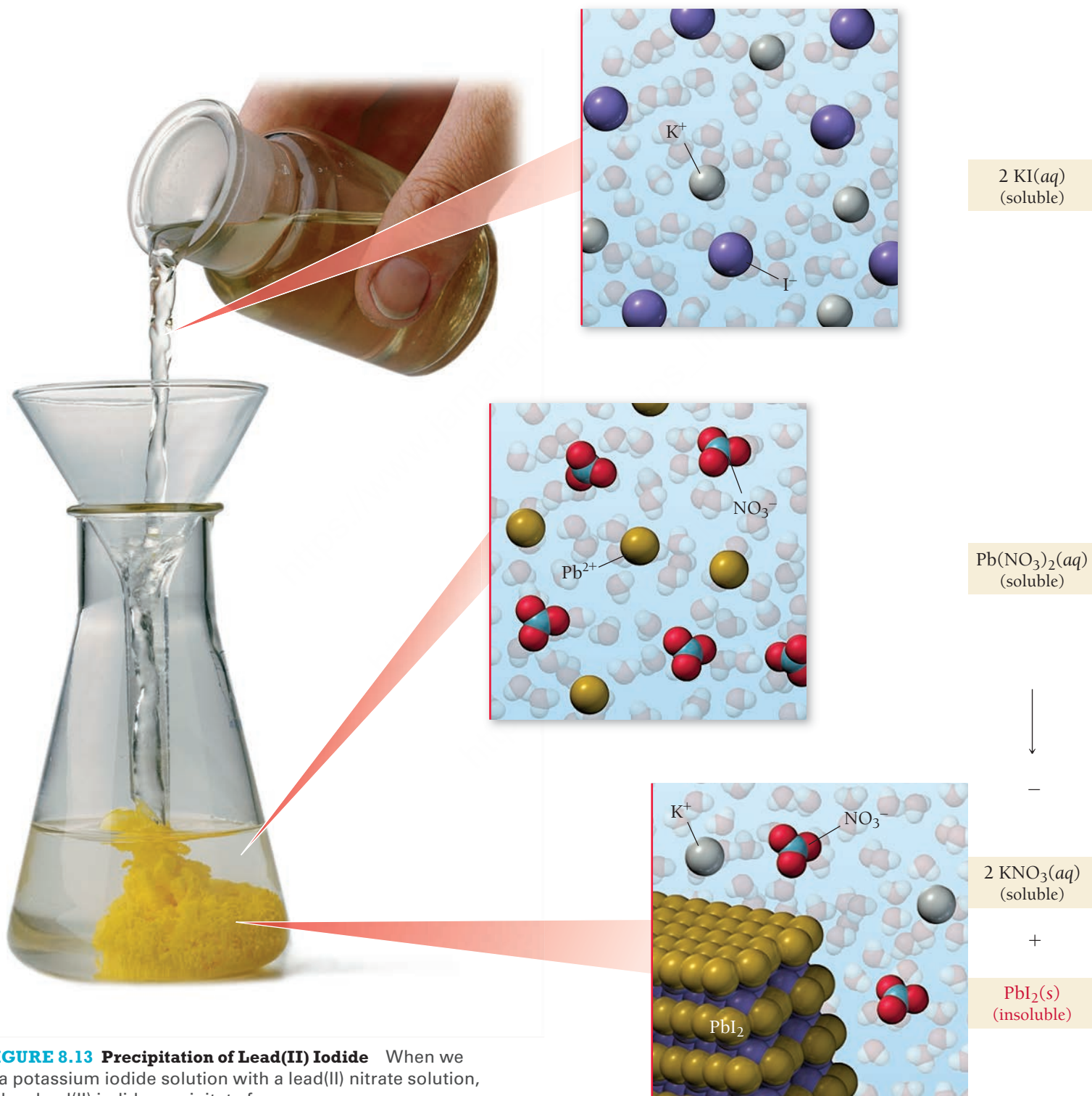


▲ The reaction of ions in hard water with soap produces a gray curd you can see after you drain the bathwater.

Precipitation Reaction

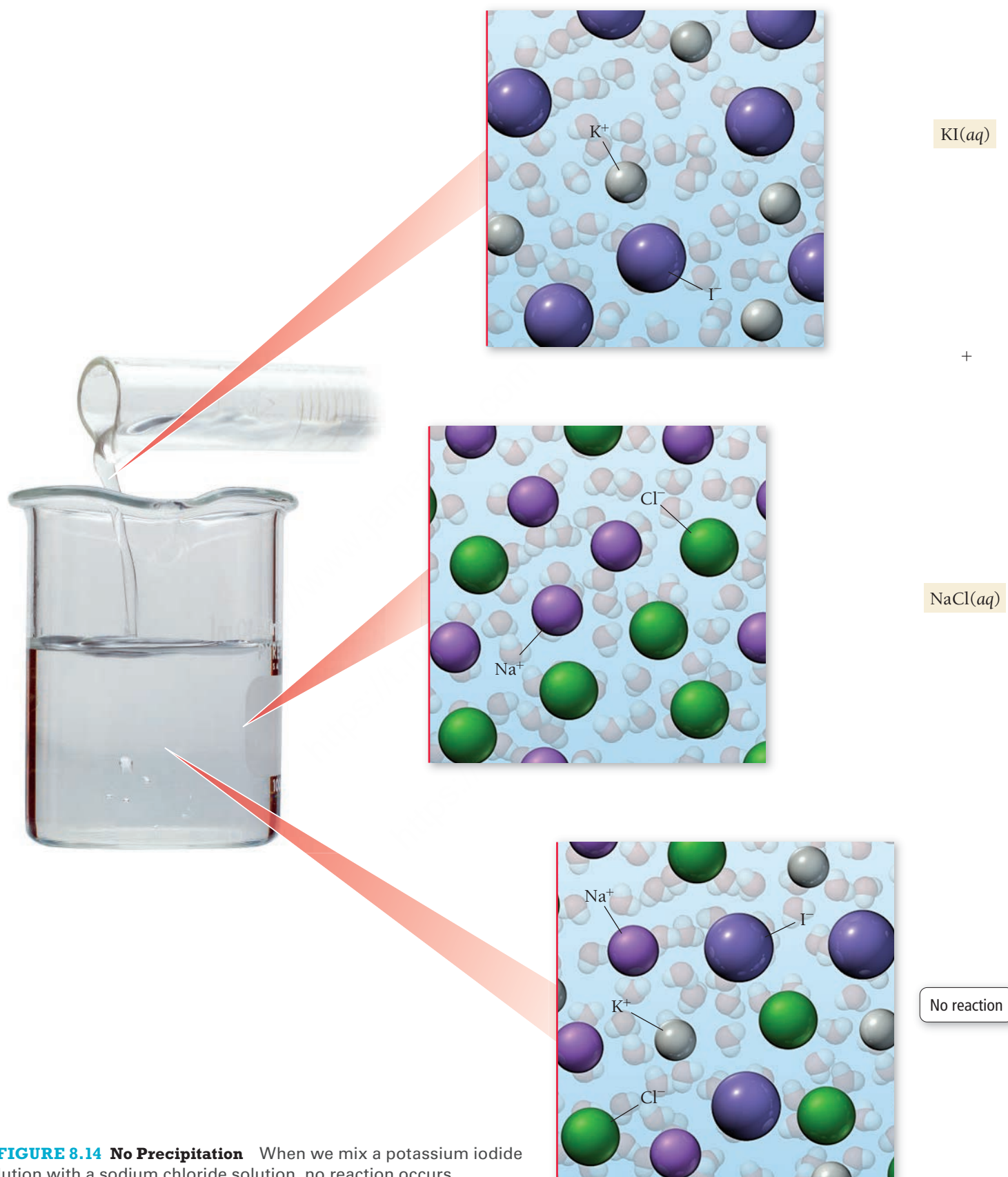


When a potassium iodide solution is mixed with a lead(II) nitrate solution, a yellow lead(II) iodide precipitate forms.



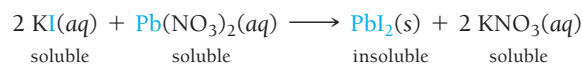
▲ **FIGURE 8.13 Precipitation of Lead(II) Iodide** When we mix a potassium iodide solution with a lead(II) nitrate solution, a yellow lead(II) iodide precipitate forms.

No Reaction

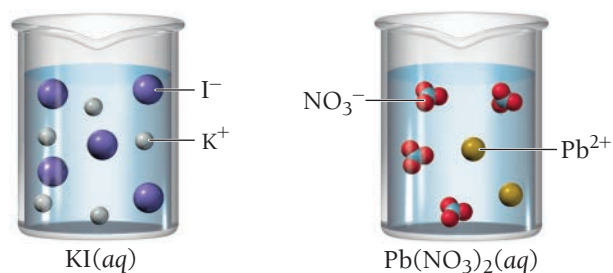


▲ **FIGURE 8.14 No Precipitation** When we mix a potassium iodide solution with a sodium chloride solution, no reaction occurs.

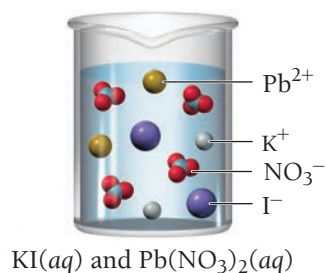
The key to predicting precipitation reactions is understanding that *only insoluble compounds form precipitates*. In a precipitation reaction, two solutions containing soluble compounds combine and an insoluble compound precipitates. Consider the precipitation reaction described previously:



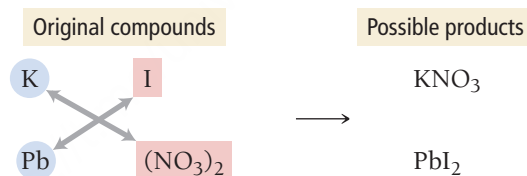
KI and $\text{Pb}(\text{NO}_3)_2$ are both soluble, but the precipitate, PbI_2 , is insoluble. Before mixing, $\text{KI}(aq)$ and $\text{Pb}(\text{NO}_3)_2(aq)$ are both dissociated in their respective solutions:



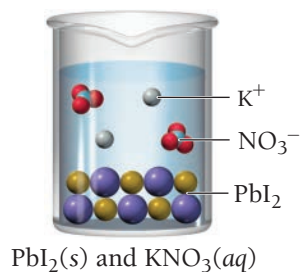
The instant that the solutions come into contact, all four ions are present:



Now, new compounds—one or both of which might be insoluble—are possible. Specifically, the cation from either compound can pair with the anion from the other to form possibly insoluble products:



If the possible products are both soluble, no reaction occurs and no precipitate forms. If one or both of the possible products are insoluble, a precipitation reaction occurs. In this case, KNO_3 is soluble, but PbI_2 is insoluble. Consequently, PbI_2 precipitates:




To predict whether a precipitation reaction will occur when two solutions are mixed and to write an equation for the reaction, we use the procedure that follows. The steps are outlined in the left column, and two examples illustrating how to apply the procedure are shown in the center and right columns.

EXAMPLE 8.6

EXAMPLE 8.7

PROCEDURE FOR Writing Equations for Precipitation Reactions	Writing Equations for Precipitation Reactions	Writing Equations for Precipitation Reactions
	Write an equation for the precipitation reaction that occurs (if any) when you mix solutions of potassium carbonate and nickel(II) chloride.	Write an equation for the precipitation reaction that occurs (if any) when you mix solutions of sodium nitrate and lithium sulfate.
1. Write the formulas of the two compounds being mixed as reactants in a chemical equation.	$K_2CO_3(aq) + NiCl_2(aq) \longrightarrow$	$NaNO_3(aq) + Li_2SO_4(aq) \longrightarrow$
2. Below the equation, write the formulas of the products that could form from the reactants by combining the cation from each reactant with the anion from the other. Make sure to write correct formulas for these ionic compounds, as described in Section 4.6.	<div>$K_2CO_3(aq) + NiCl_2(aq) \longrightarrow$ <div>Possible products</div><div>KCl NiCO3</div></div>	<div>$NaNO_3(aq) + Li_2SO_4(aq) \longrightarrow$ <div>Possible products</div><div>LiNO3 Na2SO4</div></div>
3. Refer to the solubility rules in Table 8.1 to determine whether any of the possible products are insoluble.	<p>KCl is soluble. (Compounds containing Cl^- are usually soluble and K^+ is not an exception.)</p> <p>$NiCO_3$ is insoluble. (Compounds containing CO_3^{2-} are usually insoluble and Ni^{2+} is not an exception.)</p>	<p>$LiNO_3$ is soluble. (Compounds containing NO_3^- are soluble and Li^+ is not an exception.)</p> <p>Na_2SO_4 is soluble. (Compounds containing SO_4^{2-} are generally soluble and Na^+ is not an exception.)</p>
4. If all of the possible products are soluble, there will be no precipitate. Write NO REACTION after the arrow.	Since this example has an insoluble product, we proceed to the next step.	Since this example has no insoluble product, there is no reaction. $NaNO_3(aq) + Li_2SO_4(aq) \longrightarrow$ NO REACTION
5. If any of the possible products are insoluble, write their formulas as the products of the reaction using (s) to indicate solid. Write any soluble products with (aq) to indicate aqueous.	$K_2CO_3(aq) + NiCl_2(aq) \longrightarrow$ $NiCO_3(s) + KCl(aq)$	
6. Balance the equation. Remember to adjust only coefficients, not subscripts.	$K_2CO_3(aq) + NiCl_2(aq) \longrightarrow$ $NiCO_3(s) + 2 KCl(aq)$	
	FOR PRACTICE 8.6 Write an equation for the precipitation reaction that occurs (if any) when you mix solutions of ammonium chloride and iron(III) nitrate.	FOR PRACTICE 8.7 Write an equation for the precipitation reaction that occurs (if any) when you mix solutions of sodium hydroxide and copper(II) bromide.



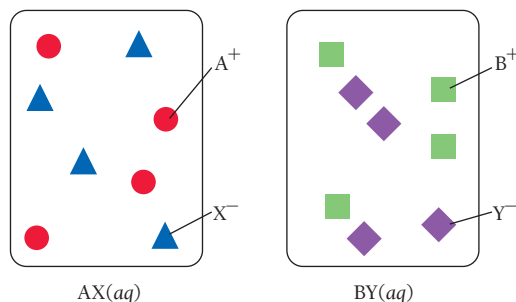
8.4

Cc

Conceptual
Connection

Precipitation Reactions

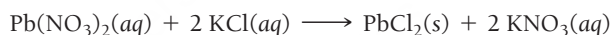
Consider the generic ionic compounds with the formulas AX and BY and the following solubility rules: AX soluble; BY soluble; AY soluble; BX insoluble. Let circles represent A^+ ions; squares represent B^+ ions; triangles represent X^- ions; and diamonds represent Y^- ions. Solutions of the two compounds (AX and BY) are represented as follows:



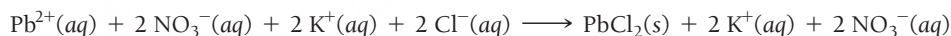
Draw a molecular-level representation showing the result of mixing the two solutions (AX and BY) and write an equation to represent the reaction.

8.6 Representing Aqueous Reactions: Molecular, Ionic, and Complete Ionic Equations

Consider the following equation for a precipitation reaction:

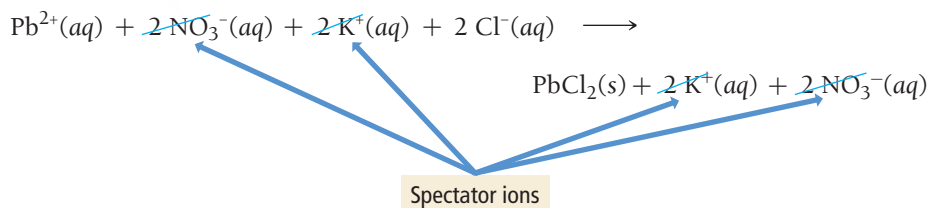


This equation is a **molecular equation**, an equation that shows the complete neutral formulas for each compound in the reaction as if they existed as molecules. In actual solutions of soluble ionic compounds, dissolved substances are present as ions. We can write equations for reactions occurring in aqueous solution in a way that better shows the dissociated nature of dissolved ionic compounds. For example, we can rewrite the above equation as:

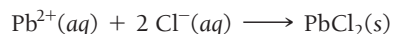


Equations such as this, which list all of the ions present as either reactants or products in a chemical reaction, are **complete ionic equations**.

Notice that in the complete ionic equation, some of the ions in solution appear unchanged on both sides of the equation. These ions are called **spectator ions** because they do not participate in the reaction.



To simplify the equation and to show more clearly what is happening, we can omit spectator ions:

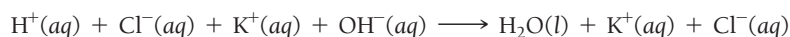


Equations that show only the species that actually change during the reaction are **net ionic equations**.

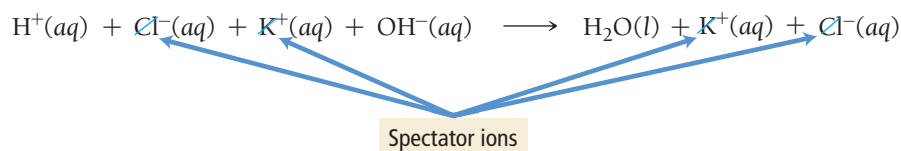
As another example, consider the reaction between $\text{HCl}(\text{aq})$ and $\text{KOH}(\text{aq})$:



Since HCl , KOH , and KCl all exist in solution primarily as independent ions, the complete ionic equation is:



To write the net ionic equation, we remove the spectator ions, those that are unchanged on both sides of the equation:



The net ionic equation is $\text{H}^+(aq) + \text{OH}^-(aq) \longrightarrow \text{H}_2\text{O}(l)$.

Summarizing Aqueous Equations

- A **molecular equation** is a chemical equation showing the complete, neutral formulas for every compound in a reaction.
- A **complete ionic equation** is a chemical equation showing all of the species as they are actually present in solution.
- A **net ionic equation** is an equation showing only the species that actually change during the reaction.

EXAMPLE 8.8

Writing Complete Ionic and Net Ionic Equations

Consider the following precipitation reaction occurring in aqueous solution:

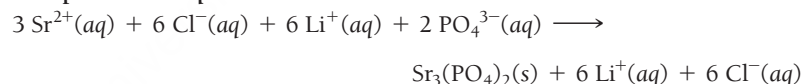


Write the complete ionic equation and net ionic equation for this reaction.

SOLUTION

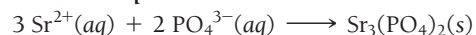
Write the complete ionic equation by separating aqueous ionic compounds into their constituent ions. The $\text{Sr}_3(\text{PO}_4)_2(s)$, precipitating as a solid, remains as one unit.

Complete ionic equation:



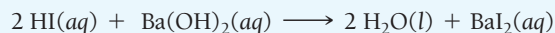
Write the net ionic equation by eliminating the spectator ions, those that do not change from one side of the reaction to the other.

Net ionic equation:



FOR PRACTICE 8.8

Consider the following reaction occurring in aqueous solution:



Write the complete ionic equation and net ionic equation for this reaction.

FOR MORE PRACTICE 8.8

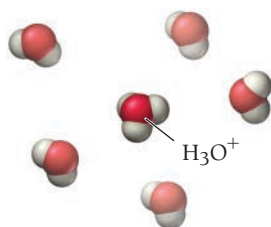
Write complete ionic and net ionic equations for the following reaction occurring in aqueous solution:



8.7 Acid–Base Reactions

An important class of reactions that occurs in aqueous solution is the acid–base reaction. In an **acid–base reaction** (also called a **neutralization reaction**), an acid reacts with a base and the two neutralize each other, producing water (or in some cases a weak electrolyte). In this section, we discuss how to define acids and bases, how to name acids, and how to write equations for the reactions between acids and bases.

We discuss acids and bases in more detail in Chapter 16.



▲ **FIGURE 8.15 The Hydronium Ion** Protons normally associate with water molecules in solution to form H_3O^+ ions.



▲ Many fruits are acidic and have the characteristically sour taste of acids.

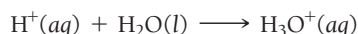
Properties of Acids and Bases

As we saw in Section 8.4, we can define *acids* as molecular compounds that release hydrogen ions (H^+) when dissolved in water. For example, $\text{HCl}(aq)$ is an acid because it produces H^+ ions in solution:




This definition of an acid is the **Arrhenius definition**.

An H^+ ion is a proton. In solution, bare protons normally associate with water molecules to form **hydronium ions** (**Figure 8.15** ◀):



Chemists use $\text{H}^+(aq)$ and $\text{H}_3\text{O}^+(aq)$ interchangeably to mean the same thing—a hydronium ion. The chemical equation for the ionization of HCl and other acids is often written to show the association of the proton with a water molecule to form the hydronium ion:



As we discussed in Section 9.4, some acids are weak acids—they do not completely ionize in solution. We represent the ionization of a weak acid with opposing half arrows.



Some acids—called **polyprotic acids**—contain more than one ionizable proton and release them sequentially. For example, sulfuric acid, H_2SO_4 , is a **diprotic acid**. It is strong in its first ionizable proton, but weak in its second:

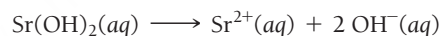


Acids are characterized by their sour taste and their ability to dissolve many metals. For example, hydrochloric acid is present in stomach fluids; its sour taste becomes painfully obvious during vomiting. Hydrochloric acid dissolves some metals. For example, if you put a strip of zinc into a test tube of hydrochloric acid, it slowly dissolves as the $\text{H}^+(aq)$ ions convert the zinc metal into $\text{Zn}^{2+}(aq)$ cations (**Figure 8.16** ▼). Acids are present in foods such as lemons and limes and are used in household products such as toilet bowl cleaners and Lime-Away®.

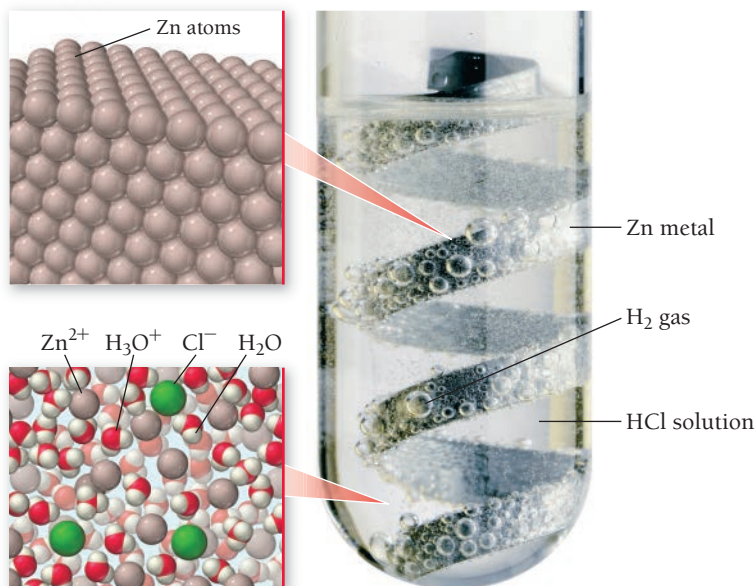
According to the Arrhenius definition, **bases** produce OH^- in solution. Sodium hydroxide (NaOH) is a base because it produces OH^- ions in solution:



In analogy to diprotic acids, some bases, such as $\text{Sr}(\text{OH})_2$, produce two moles of OH^- per mole of the base:



Acids Dissolve Many Metals



► **FIGURE 8.16 Hydrochloric Acid Dissolving Zinc Metal** The zinc atoms are ionized to zinc ions, which dissolve in the water. The HCl forms H_2 gas, which is responsible for the bubbles you can see in the test tube.

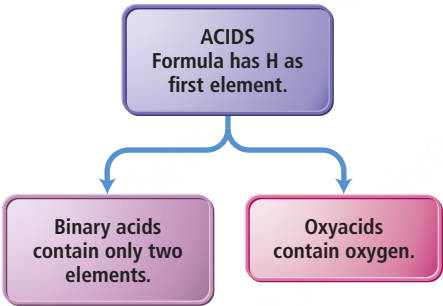
TABLE 8.2 Some Common Acids and Bases

Name of Acid	Formula	Name of Base	Formula
Hydrochloric acid	HCl	Sodium hydroxide	NaOH
Hydrobromic acid	HBr	Lithium hydroxide	LiOH
Hydroiodic acid	HI	Potassium hydroxide	KOH
Nitric acid	HNO ₃	Calcium hydroxide	Ca(OH) ₂
Sulfuric acid	H ₂ SO ₄	Barium hydroxide	Ba(OH) ₂
Perchloric acid	HClO ₄	Ammonia*	NH ₃ (weak base)
Acetic acid	HC ₂ H ₃ O ₂ (weak acid)		
Hydrofluoric acid	HF (weak acid)		

*Ammonia does not contain OH, but it produces OH in a reaction with water that occurs only to a small extent: $\text{NH}_3(aq) + \text{H}_2\text{O}(l) \rightleftharpoons \text{NH}_4^+(aq) + \text{OH}^-(aq)$.

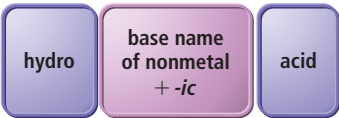
Table 8.2 lists common acids and bases. Acids and bases are present in many everyday substances. We have already mentioned that foods such as citrus fruits and vinegar contain acids. Soap, baking soda, and milk of magnesia all contain bases.

We can categorize acids into two types: binary acids and oxyacids.



Naming Binary Acids

Binary acids are composed of hydrogen and a nonmetal. Names for binary acids have the form:



For example, HCl(aq) is hydrochloric acid and HBr(aq) is hydrobromic acid.

HCl(aq) hydrochloric acid HBr(aq) hydrobromic acid

EXAMPLE 8.9

Naming Binary Acids

Name HI(aq).

SOLUTION

The base name of I is *iod* so HI(aq) is hydroiodic acid.

HI(aq) hydroiodic acid

FOR PRACTICE 8.9

Name HF(aq).



Many common household products are bases.

Naming Oxyacids

Oxyacids contain hydrogen and an oxyanion (an anion containing a nonmetal and oxygen). The common oxyanions are listed in the table of polyatomic ions in Chapter 4 (Table 4.4). For example, $\text{HNO}_3(aq)$ contains the nitrate (NO_3^-) ion, $\text{H}_2\text{SO}_3(aq)$ contains the sulfite (SO_3^{2-}) ion, and $\text{H}_2\text{SO}_4(aq)$ contains the sulfate (SO_4^{2-}) ion. Oxyacids are a combination of one or more H^+ ions with an oxyanion (see Table 4.4). The number of H^+ ions depends on the charge of the oxyanion; the formula is always charge-neutral. The names of oxyacids depend on the ending of the oxyanion and take the following forms:

oxyanions ending with <i>-ate</i>	base name of oxyanion + <i>-ic</i>	acid
oxyanions ending with <i>-ite</i>	base name of oxyanion + <i>-ic</i>	acid

So $\text{HNO}_3(aq)$ is nitric acid (oxyanion is nitrate), and $\text{H}_2\text{SO}_3(aq)$ is sulfurous acid (oxyanion is sulfite).



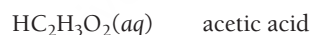
EXAMPLE 8.10

Naming Oxyacids

Name $\text{HC}_2\text{H}_3\text{O}_2(aq)$.

SOLUTION

The oxyanion is acetate, which ends in *-ate*; therefore, the name of the acid is *acetic acid*.



FOR PRACTICE 8.10

Name $\text{HNO}_2(aq)$.

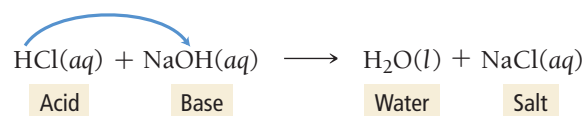
FOR MORE PRACTICE 8.10

Write the formula for perchloric acid.

Acid–Base Reactions

Our stomachs contain hydrochloric acid ($\text{HCl}(aq)$), which acts in the digestion of food. Certain foods or stress, however, can increase the stomach's acidity to uncomfortable levels, causing acid stomach or heartburn. Antacids are over-the-counter medicines that work by reacting with and neutralizing stomach acid. Antacids employ different bases as neutralizing agents. Milk of magnesia, for example, contains $\text{Mg}(\text{OH})_2$ and Mylanta[®] contains $\text{Al}(\text{OH})_3$. All antacids, regardless of the base they employ, neutralize stomach acid and relieve heartburn through *acid–base reactions*.

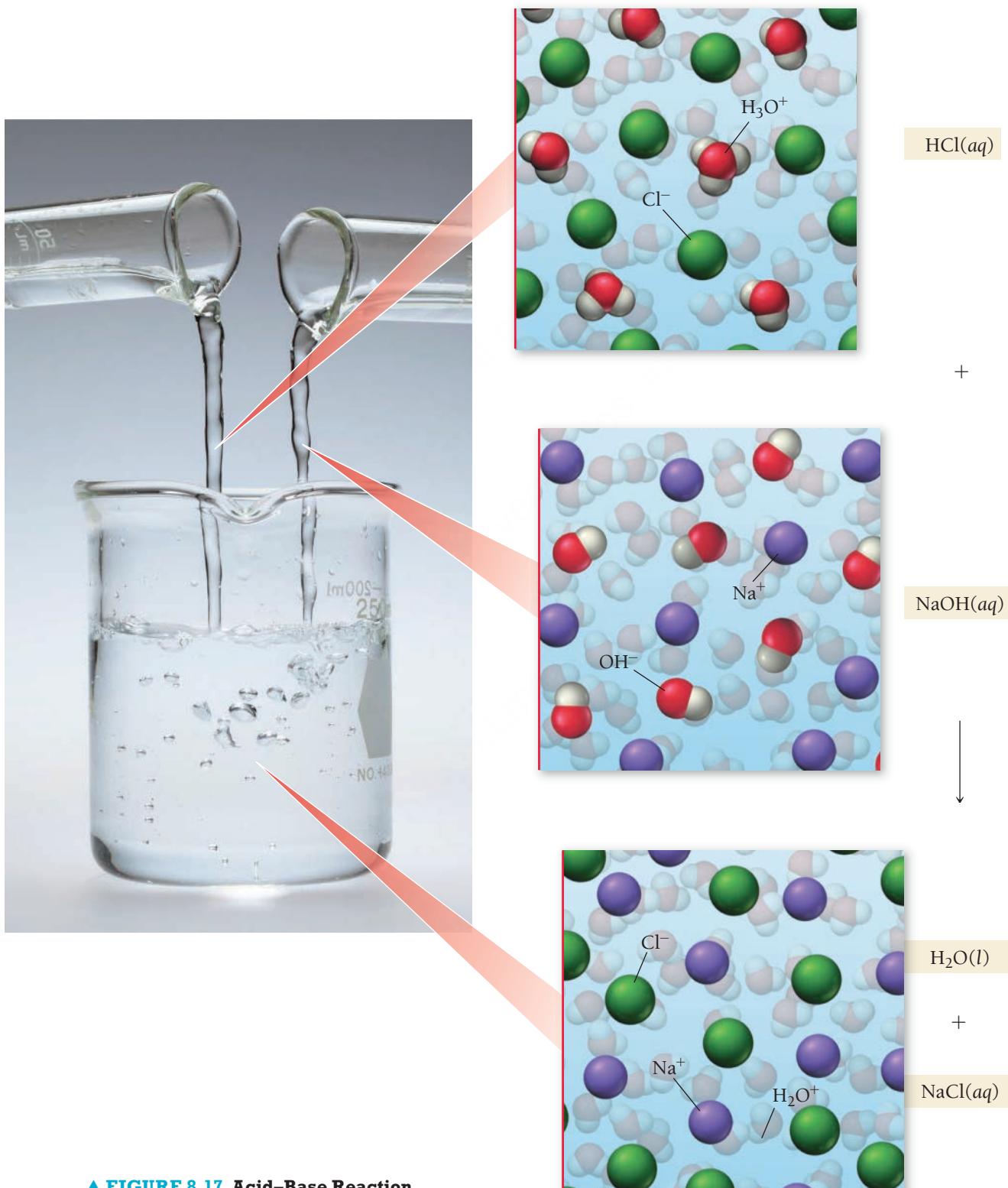
When an acid and a base mix, the $\text{H}^+(aq)$ from the acid—whether it is weak or strong—combines with the $\text{OH}^-(aq)$ from the base to form $\text{H}_2\text{O}(l)$ (**Figure 8.17** ►). Consider the reaction between hydrochloric acid and sodium hydroxide:



Acid-Base Reaction



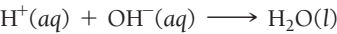
The reaction between hydrochloric acid and sodium hydroxide forms water and a salt, sodium chloride, which remains dissolved in the solution.



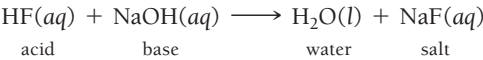
▲ **FIGURE 8.17** Acid-Base Reaction

The word *salt* in this sense applies to any ionic compound and is therefore more general than the common usage, which refers only to table salt (NaCl).

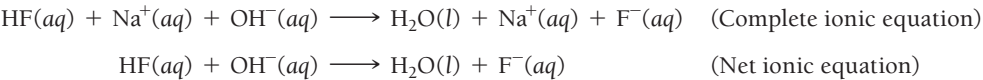
Acid–base reactions generally form water and an ionic compound—called a **salt**—that usually remains dissolved in the solution. The net ionic equation for acid–base reactions involving a strong acid is:



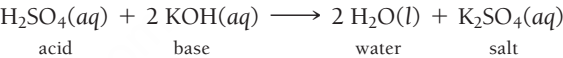
However, if the acid is a weak acid, the net ionic equation is slightly different. For example, consider the acid–base equation between hydrofluoric acid and sodium hydroxide:



The complete ionic equation and net ionic equation for this reaction are:



Notice that since HF is a weak acid, we do not show it as ionized in the ionic equations. Another example of an acid–base reaction is the reaction between sulfuric acid and potassium hydroxide:



Again, notice the pattern of acid and base reacting to form water and a salt.



When writing equations for acid–base reactions, write the formula of the salt using the procedure for writing formulas of ionic compounds demonstrated in Section 4.6.

EXAMPLE 8.11

Writing Equations for Acid–Base Reactions Involving a Strong Acid

Write a molecular and net ionic equation for the reaction between aqueous HI and aqueous Ba(OH)₂.

SOLUTION

First identify these substances as an acid and a base. Begin by writing the unbalanced equation in which the acid and the base combine to form water and a salt.	$\underset{\text{acid}}{\text{HI}(aq)} + \underset{\text{base}}{\text{Ba}(\text{OH})_2(aq)} \longrightarrow \underset{\text{water}}{\text{H}_2\text{O}(l)} + \underset{\text{salt}}{\text{BaI}_2(aq)}$
Balance the equation; this is the molecular equation.	Molecular equation: $2 \text{HI}(aq) + \text{Ba}(\text{OH})_2(aq) \longrightarrow 2 \text{H}_2\text{O}(l) + \text{BaI}_2(aq)$
Write the net ionic equation by removing the spectator ions.	Net ionic equation: $2 \text{H}^+(aq) + 2 \text{OH}^-(aq) \longrightarrow 2 \text{H}_2\text{O}(l) \text{ or simply}$ $\text{H}^+(aq) + \text{OH}^-(aq) \longrightarrow \text{H}_2\text{O}(l)$

FOR PRACTICE 8.11

Write a molecular and a net ionic equation for the reaction that occurs between aqueous HBr and aqueous LiOH.

EXAMPLE 8.12

Writing Equations for Acid–Base Reactions Involving a Weak Acid

Write a molecular equation, complete ionic equation, and net ionic equation for the reaction between aqueous acetic acid (HC₂H₃O₂) and aqueous potassium hydroxide (KOH).

SOLUTION	
Begin by writing the molecular equation in which the acid and the base combine to form water and a salt. (The equation is already balanced.)	Molecular equation: $\text{HC}_2\text{H}_3\text{O}_2(aq) + \text{KOH}(aq) \longrightarrow \text{H}_2\text{O}(l) + \text{KC}_2\text{H}_3\text{O}_2(aq)$
Write the complete ionic equation by separating aqueous ionic compounds into their constituent ions. Do not separate HC ₂ H ₃ O ₂ (aq) because it is a weak acid (and a weak electrolyte).	Complete ionic equation: $\text{HC}_2\text{H}_3\text{O}_2(aq) + \text{K}^+(aq) + \text{OH}^-(aq) \longrightarrow \text{H}_2\text{O}(l) + \text{K}^+(aq) + \text{C}_2\text{H}_3\text{O}_2^-(aq)$
Write the net ionic equation by eliminating the spectator ions.	Net ionic equation: $\text{HC}_2\text{H}_3\text{O}_2(aq) + \text{OH}^-(aq) \longrightarrow \text{H}_2\text{O}(l) + \text{C}_2\text{H}_3\text{O}_2^-(aq)$

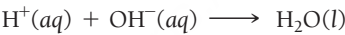
FOR PRACTICE 8.12
Write the net ionic equation for the reaction between HCHO₂ (a weak acid) and NaOH.

Acid–Base Titrations

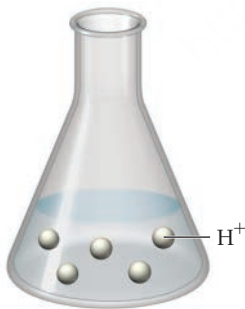
We can apply the principles of acid–base neutralization and stoichiometry to a common laboratory procedure called a *titration*. In a **titration**, a substance in a solution of known concentration is reacted with another substance in a solution of unknown concentration. For example, consider the following acid–base reaction:



The net ionic equation for this reaction eliminates the spectator ions:



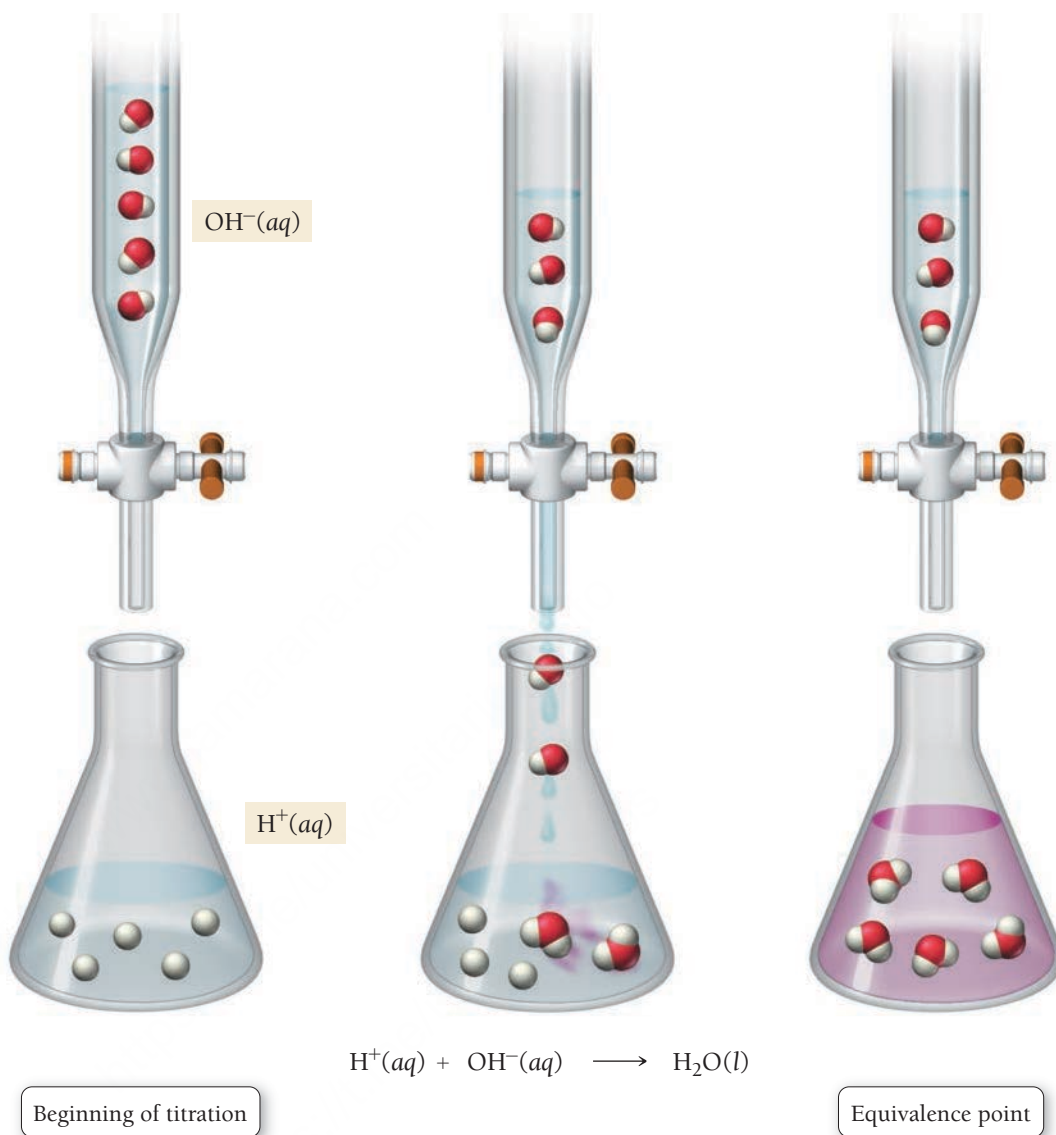
Suppose we have an HCl solution represented by the following molecular diagram (we have omitted the Cl[−] ions and the H₂O molecules not involved in the reaction from this representation for clarity):




In titrating this sample, we slowly add a solution of known OH[−] concentration, as shown in the molecular diagrams in **Figure 8.18** on the next page. As the OH[−] is added, it reacts with and neutralizes the H⁺, forming water. At the **equivalence point**—the point in the titration when the number of moles of OH[−] equals the number of moles of H⁺ in solution—the titration is complete.

► FIGURE 8.18 Acid–Base Titration

Acid–Base Titration



Indicator in Titration



The equivalence point is typically signaled by an **indicator**, a dye whose color depends on the acidity or basicity of the solution (**Figure 8.19** ◀).

We cover acid–base titrations and indicators in more detail in Chapter 16. In most laboratory titrations, the concentration of one of the reactant solutions is unknown, and the concentration of the other is precisely known. By carefully measuring the volume of each solution required to reach the equivalence point, we can determine the concentration of the unknown solution, as demonstrated in Example 8.13.

◀ **FIGURE 8.19 Titration** In this titration, NaOH is added to a dilute HCl solution. When the NaOH and HCl reach stoichiometric proportions (the equivalence point), the phenolphthalein indicator changes color to pink.

EXAMPLE 8.13**Acid–Base Titration**

The titration of a 10.00-mL sample of an HCl solution of unknown concentration requires 12.54 mL of 0.100 M NaOH solution to reach the equivalence point. What is the concentration of the unknown HCl solution in M?

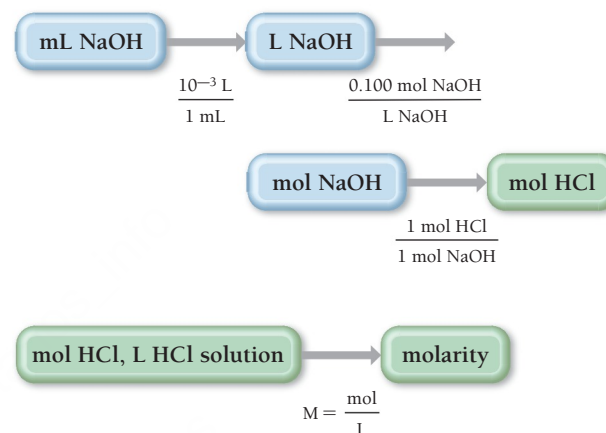
SORT You are given the volume and concentration of NaOH solution required to titrate a given volume of HCl solution. You are asked to find the concentration of the HCl solution.

STRATEGIZE Since this problem involves an acid–base neutralization reaction between HCl and NaOH, start by writing the balanced equation.

The first part of the conceptual plan has the form: volume A \longrightarrow moles A \longrightarrow moles B. The concentration of the NaOH solution is a conversion factor between moles and volume of NaOH. The balanced equation provides the relationship between number of moles of NaOH and number of moles of HCl.

In the second part of the conceptual plan, use the number of moles of HCl (from the first part) and the volume of HCl solution (given) to calculate the molarity of the HCl solution.

GIVEN: 12.54 mL of NaOH solution; 0.100 M NaOH solution; 10.00 mL of HCl solution
FIND: concentration of HCl solution

**CONCEPTUAL PLAN****RELATIONSHIPS USED**

$$10^{-3} \text{ L} = 1 \text{ mL}$$

$$M(\text{NaOH}) = \frac{0.100 \text{ mol NaOH}}{\text{L NaOH}}$$



$$\text{molarity (M)} = \frac{\text{moles of solute (mol)}}{\text{volume of solution (L)}}$$

SOLVE First determine the number of moles of HCl in the unknown solution.

Next divide the number of moles of HCl by the volume of the HCl solution in L. 10.0 mL is equivalent to 0.010 L.

SOLUTION

$$\begin{aligned}
 12.54 \text{ mL NaOH} &\times \frac{10^{-3} \text{ L}}{1 \text{ mL}} \times \frac{0.100 \text{ mol NaOH}}{\text{L NaOH}} \\
 &\times \frac{1 \text{ mol HCl}}{1 \text{ mol NaOH}} = 1.25 \times 10^{-3} \text{ mol HCl} \\
 \text{molarity} &= \frac{1.25 \times 10^{-3} \text{ mol HCl}}{0.01000 \text{ L}} = 0.125 \text{ M HCl}
 \end{aligned}$$

CHECK The units of the answer (M HCl) are correct. The magnitude of the answer (0.125 M) is reasonable because it is similar to the molarity of the NaOH solution, as expected from the reaction stoichiometry (1 mol HCl reacts with 1 mol NaOH) and the similar volumes of NaOH and HCl.

FOR PRACTICE 8.13

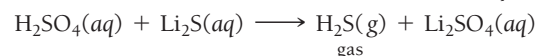
The titration of a 20.0-mL sample of H_2SO_4 solution of unknown concentration requires 22.87 mL of a 0.158 M KOH solution to reach the equivalence point. What is the concentration of the unknown H_2SO_4 solution?

FOR MORE PRACTICE 8.13

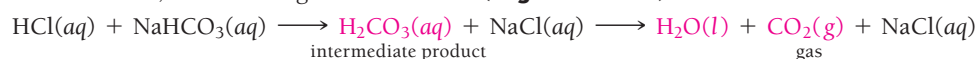
What volume (in mL) of 0.200 M NaOH do you need to titrate 35.00 mL of 0.140 M HBr to the equivalence point?

8.8 Gas-Evolution Reactions

In a **gas-evolution reaction**, a gas forms, resulting in bubbling. As in precipitation reactions (see Section 8.5), the reactions occur when the anion from one reactant combines with the cation of the other. Many gas-evolution reactions are also acid–base reactions. Some gas-evolution reactions form a gaseous product directly when the cation of one reactant combines with the anion of the other. For example, when sulfuric acid reacts with lithium sulfide, dihydrogen sulfide gas forms:



Other gas-evolution reactions form an intermediate product that then decomposes (breaks down into simpler substances) to form a gas. For example, when aqueous hydrochloric acid is mixed with aqueous sodium bicarbonate, the following reaction occurs (**Figure 8.20** ▼):

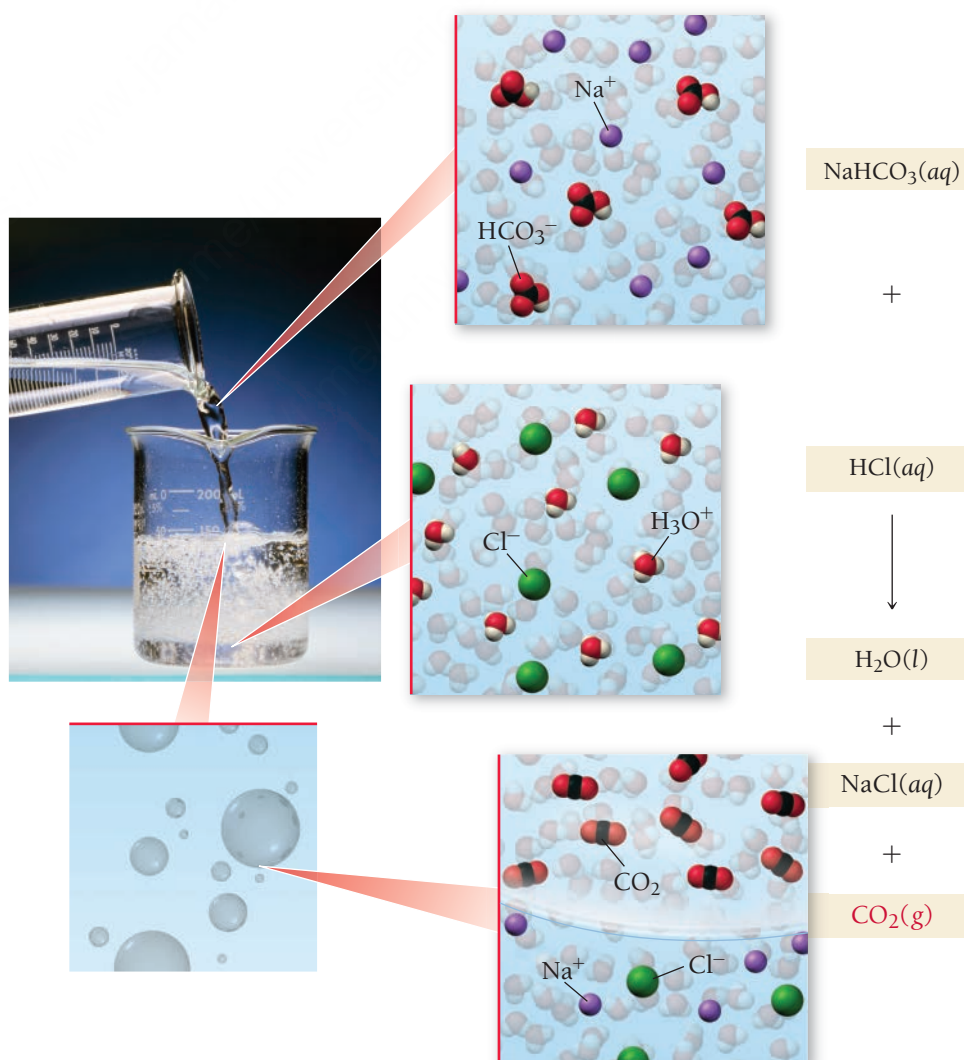


Gas-Evolution Reaction



When aqueous sodium bicarbonate is mixed with aqueous hydrochloric acid, gaseous CO_2 bubbles are the result of the reaction.

▲ Gas-evolution reactions, such as the reaction of hydrochloric acid with limestone (CaCO_3), often produce CO_2 ; bubbling occurs as the gas is released.



► **FIGURE 8.20** Gas-Evolution Reaction

TABLE 8.3 Types of Compounds That Undergo Gas-Evolution Reactions

Reactant Type	Intermediate Product	Gas Evolved	Example
Sulfides	None	H ₂ S	2 HCl(aq) + K ₂ S(aq) → H ₂ S(g) + 2 KCl(aq)
Carbonates and bicarbonates	H ₂ CO ₃	CO ₂	2 HCl(aq) + K ₂ CO ₃ (aq) → H ₂ O(l) + CO ₂ (g) + 2 KCl(aq)
Sulfites and bisulfites	H ₂ SO ₃	SO ₂	2 HCl(aq) + K ₂ SO ₃ (aq) → H ₂ O(l) + SO ₂ (g) + 2 KCl(aq)
Ammonium	NH ₄ OH	NH ₃	NH ₄ Cl(aq) + KOH(aq) → H ₂ O(l) + NH ₃ (g) + KCl(aq)

The intermediate product, H₂CO₃, is not stable and decomposes into H₂O and gaseous CO₂. Other important gas-evolution reactions form either H₂SO₃ or NH₄OH as intermediate products:

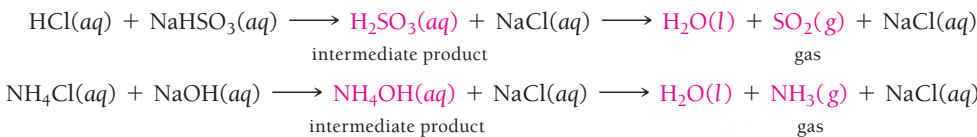


Table 8.3 lists the main types of compounds that form gases in aqueous reactions, as well as the gases that form.

The intermediate product NH₄OH provides a convenient way to think about this reaction, but the extent to which it actually forms is debatable.

EXAMPLE 8.14

Writing Equations for Gas-Evolution Reactions

Write a molecular equation for the gas-evolution reaction that occurs when you mix aqueous nitric acid and aqueous sodium carbonate.

Begin by writing an unbalanced equation in which the cation of each reactant combines with the anion of the other.

$$\text{HNO}_3\text{(aq)} + \text{Na}_2\text{CO}_3\text{(aq)} \longrightarrow \text{H}_2\text{CO}_3\text{(aq)} + \text{NaNO}_3\text{(aq)}$$

You must then recognize that H₂CO₃(aq) decomposes into H₂O(l) and CO₂(g) and write these products into the equation.

$$\text{HNO}_3\text{(aq)} + \text{Na}_2\text{CO}_3\text{(aq)} \longrightarrow \text{H}_2\text{O(l)} + \text{CO}_2\text{(g)} + \text{NaNO}_3\text{(aq)}$$

Finally, balance the equation.

$$2 \text{HNO}_3\text{(aq)} + \text{Na}_2\text{CO}_3\text{(aq)} \longrightarrow \text{H}_2\text{O(l)} + \text{CO}_2\text{(g)} + 2 \text{NaNO}_3\text{(aq)}$$

FOR PRACTICE 8.14

Write a molecular equation for the gas-evolution reaction that occurs when you mix aqueous hydrobromic acid and aqueous potassium sulfite.

FOR MORE PRACTICE 8.14

Write a net ionic equation for the reaction that occurs when you mix hydroiodic acid with calcium sulfide.

8.9 Oxidation–Reduction Reactions

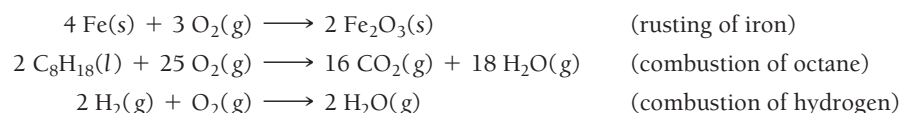
Oxidation–reduction reactions or **redox reactions** are reactions in which electrons transfer from one reactant to the other. These types of reactions occur both in and out of solution. The rusting of iron, the bleaching of hair, and the production of electricity in batteries involve redox reactions. Many redox reactions involve the reaction of a substance with oxygen (**Figure 8.21** ►, on the next page):

Oxidation–reduction reactions are covered in more detail in Chapter 19.

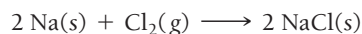
https://t.me/universitarios_info

https://www.jamarana.com

https://t.me/universitarios



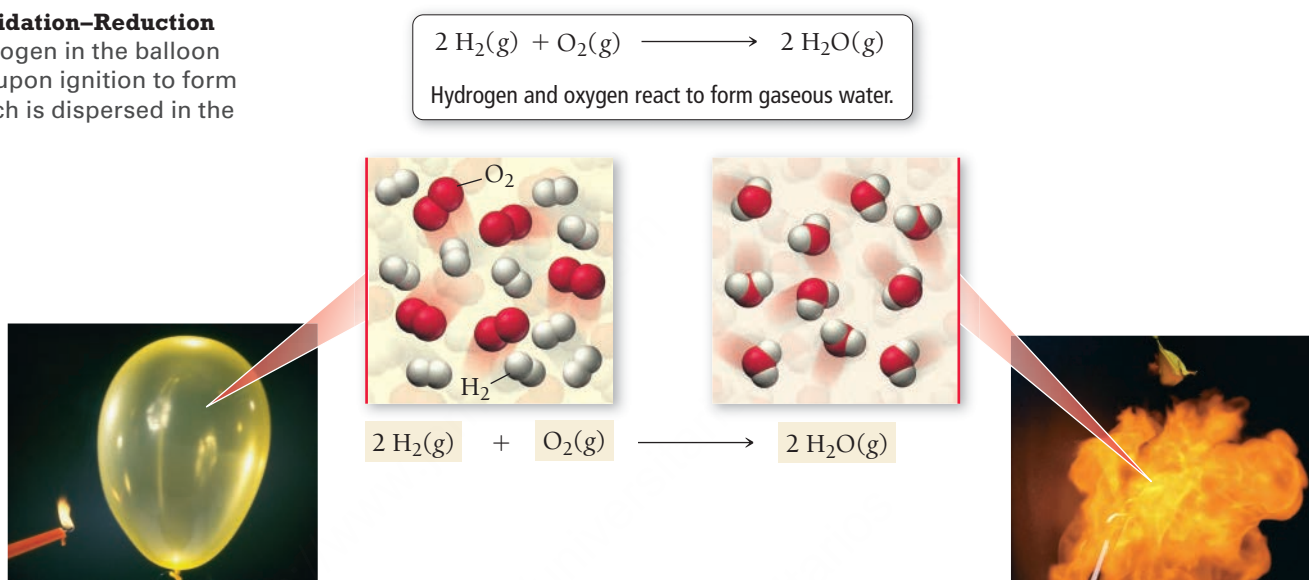
Combustion reactions, first covered in Section 7.6, are a type of redox reaction. However, redox reactions need not involve oxygen. Consider, for example, the reaction between sodium and chlorine to form sodium chloride (NaCl), depicted in **Figure 8.22** ▼:



Oxidation–Reduction Reaction

► FIGURE 8.21 Oxidation–Reduction Reaction

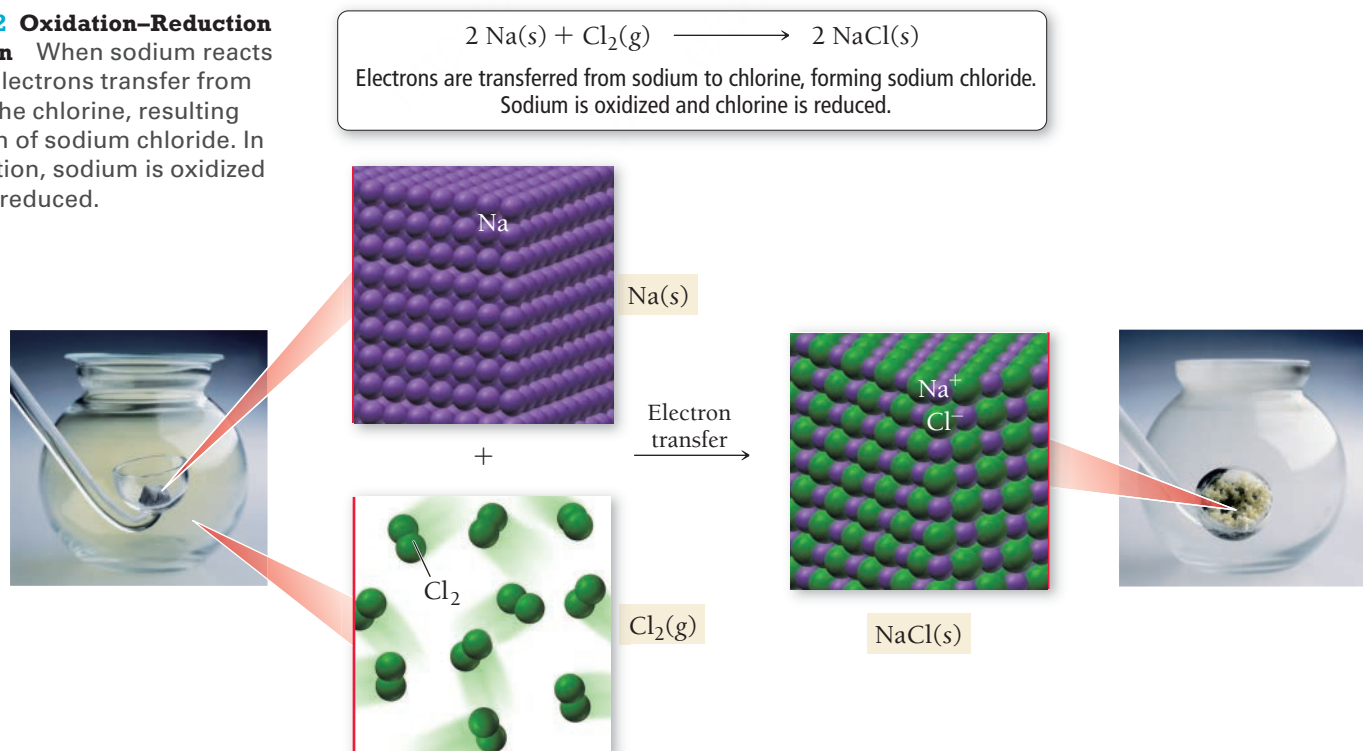
Reaction The hydrogen in the balloon reacts with oxygen upon ignition to form gaseous water (which is dispersed in the flame).



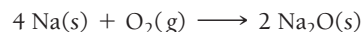
Oxidation–Reduction Reaction without Oxygen

► FIGURE 8.22 Oxidation–Reduction without Oxygen

When sodium reacts with chlorine, electrons transfer from the sodium to the chlorine, resulting in the formation of sodium chloride. In this redox reaction, sodium is oxidized and chlorine is reduced.

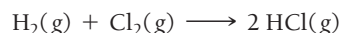


This reaction is similar to the reaction between sodium and oxygen, which forms sodium oxide (as one possible product):



In both cases, a metal (which has a tendency to lose electrons) reacts with a nonmetal (which has a tendency to gain electrons). In both cases, metal atoms lose electrons to nonmetal atoms. A fundamental definition of **oxidation** is the loss of electrons, and a fundamental definition of **reduction** is the gain of electrons.

The transfer of electrons does not need to be a *complete* transfer (as occurs in the formation of an ionic compound) for the reaction to qualify as oxidation–reduction. For example, consider the reaction between hydrogen gas and chlorine gas:



Because chlorine is more electronegative than hydrogen (see Section 5.2), the bond between hydrogen and chlorine is polar (**Figure 8.23** ▶). Notice that in the reaction, hydrogen has lost some of its electron density to chlorine. Therefore, in the reaction, hydrogen is oxidized and chlorine is reduced—this is a redox reaction.

Oxidation States

Determining whether or not a reaction between a metal and a nonmetal is a redox reaction is fairly straightforward because of ion formation. But how do we identify redox reactions that occur between nonmetals? Chemists have devised a scheme to track electrons before and after a chemical reaction. In this scheme—which is like bookkeeping for electrons—we assign each shared electron to the most electronegative atom. Then we give a number, called the **oxidation state** or **oxidation number**, to each atom based on the electron assignments. In other words, *the oxidation number of an atom in a compound is the “charge” it would have if all shared electrons were assigned to the more electronegative atom.*

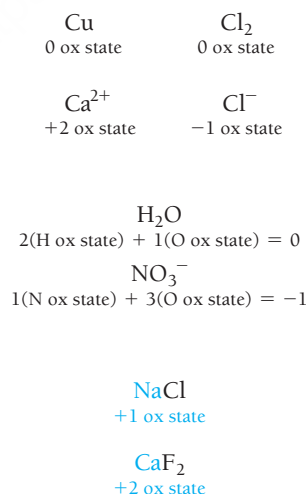
For example, consider HCl. Since chlorine is more electronegative than hydrogen, we assign the two shared electrons in the bond to chlorine; then H (which lost an electron in our assignment) has an oxidation state of +1, and Cl (which gained one electron in our assignment) has an oxidation state of –1. Notice that, in contrast to ionic charges, which are usually written with the sign of the charge *after* the magnitude (1+ and 1–, for example), we write oxidation states with the sign of the charge *before* the magnitude (+1 and –1, for example). We use the following rules to assign oxidation states to atoms in elements and compounds:

Rules for Assigning Oxidation States

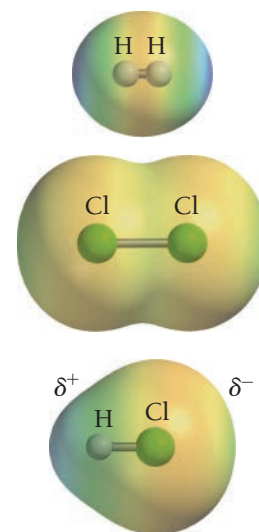
(These rules are hierarchical. If any two rules conflict, follow the rule that is higher on the list.)

1. The oxidation state of an atom in a free element is 0.
2. The oxidation state of a monoatomic ion is equal to its charge.
3. The sum of the oxidation states of all atoms in:
 - a neutral molecule or formula unit is 0.
 - an ion is equal to the charge of the ion.
4. In their compounds, metals have positive oxidation states.
 - Group 1A metals *always* have an oxidation state of +1.
 - Group 2A metals *always* have an oxidation state of +2.
5. In their compounds, we assign nonmetals oxidation states according to the table on the right. Entries at the top of the table take precedence over entries at the bottom of the table.

Examples



Helpful Mnemonic: O I L R I G—
Oxidation Is Loss; Reduction Is Gain.



▲ FIGURE 8.23 Electrostatic Potential Maps Showing Electron Transfer When hydrogen bonds to chlorine, the electrons are unevenly shared, resulting in an increase of electron density (reduction) for chlorine and a decrease in electron density (oxidation) for hydrogen.

Do not confuse oxidation state with ionic charge. Unlike ionic charge—which is a real property of an ion—the oxidation state of an atom is merely a theoretical (but useful) construct.

Nonmetal	Oxidation State	Example
Fluorine	–1	MgF ₂ –1 ox state
Hydrogen	+1	H ₂ O +1 ox state
Oxygen	–2	CO ₂ –2 ox state
Group 7A	–1	CCl ₄ –1 ox state
Group 6A	–2	H ₂ S –2 ox state
Group 5A	–3	NH ₃ –3 ox state

When assigning oxidation states, these points also apply:

- The oxidation state of any given element generally depends on what other elements are present in the compound. (The exceptions are the group 1A and 2A metals, which are *always* +1 and +2, respectively.)
- Rule 3 must always be followed. Therefore, when following the hierarchy shown in rule 5, we give priority to the element(s) highest on the list and then assign the oxidation state of the element lowest on the list using rule 3.
- When assigning oxidation states to elements that are not covered by rules 4 and 5 (such as carbon), we use rule 3 to deduce their oxidation state once all other oxidation states have been assigned.

EXAMPLE 8.15

Assigning Oxidation States

Assign an oxidation state to each atom in each element, ion, or compound.

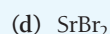


SOLUTION

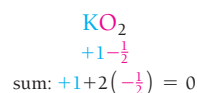
Because Cl_2 is a free element, the oxidation state of both Cl atoms is 0 (rule 1).	(a) Cl_2 ClCl 0 0
Because Na^+ is a monoatomic ion, the oxidation state of the Na^+ ion is +1 (rule 2).	(b) Na^+ Na^+ +1
The oxidation state of K is +1 (rule 4). The oxidation state of F is -1 (rule 5). Because this is a neutral compound, the sum of the oxidation states is 0.	(c) KF KF +1 -1 sum: +1 -1 = 0
The oxidation state of oxygen is -2 (rule 5). You deduce the oxidation state of carbon using rule 3, which says that the sum of the oxidation states of all the atoms must be 0.	(d) CO_2 (C ox state) + 2(O ox state) = 0 (C ox state) + 2(-2) = 0 C ox state = +4 CO_2 +4 -2 sum: +4 + 2(-2) = 0
The oxidation state of oxygen is -2 (rule 5). You would ordinarily expect the oxidation state of S to be -2 (rule 5). However, if that were the case, the sum of the oxidation states would not equal the charge of the ion. Because O is higher on the list than S, it takes priority and you calculate the oxidation state of sulfur by setting the <i>sum</i> of all of the oxidation states equal to -2 (the charge of the ion).	(e) SO_4^{2-} (S ox state) + 4(O ox state) = -2 (S ox state) + 4(-2) = -2 S ox state = +6 SO_4^{2-} +6 -2 sum: +6 + 4(-2) = -2
The oxidation state of potassium is +1 (rule 4). You would ordinarily expect the oxidation state of O to be -2 (rule 5), but rule 4 takes priority, and you need to deduce the oxidation state of O by setting the sum of all of the oxidation states equal to 0.	(f) K_2O_2 2(K ox state) + 2(O ox state) = 0 2(+1) + 2(O ox state) = 0 O ox state = -1 K_2O_2 +1 -1 sum: 2(+1) + 2(-1) = 0

FOR PRACTICE 8.15

Assign an oxidation state to each atom in each element, ion, or compound.



In most cases, oxidation states are positive or negative integers; however, on occasion an atom within a compound can have a fractional oxidation state. Consider KO_2 . We assign the oxidation states as follows:



In KO_2 , oxygen has a $-\frac{1}{2}$ oxidation state. Although this seems unusual, it is accepted because oxidation states are merely an imposed electron bookkeeping scheme, not an actual physical quantity.

Oxidation Numbers in Polyatomic Ions

Which statement best describes the difference between the charge of a polyatomic ion and the *oxidation states* of its constituent atoms? (For example, the charge of NO_3^- is $1-$, and the oxidation states of its atoms are $+5$ for the nitrogen atom and -2 for each oxygen atom.)

- The charge of a polyatomic ion is a property of the entire ion, while the oxidation states are assigned to each individual atom.
- The oxidation state of the ion is the same as its charge.
- The charge of a polyatomic ion is not a real physical property, while the oxidation states of atoms are actual physical properties.

8.5

Cc

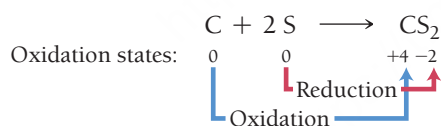
Conceptual
Connection

Identifying Redox Reactions

We can use oxidation states to identify redox reactions, even between nonmetals. For example, is the following reaction between carbon and sulfur a redox reaction?



If it is a redox reaction, which element is oxidized? Which element is reduced? We use the oxidation state rules to assign oxidation states to all elements on both sides of the equation:



Carbon changes from an oxidation state of 0 to an oxidation state of $+4$. In terms of our electron bookkeeping scheme (the assigned oxidation state), carbon *loses electrons* and is *oxidized*. Sulfur changes from an oxidation state of 0 to an oxidation state of -2 . In terms of our electron bookkeeping scheme, sulfur *gains electrons* and is *reduced*. In terms of oxidation states, oxidation and reduction are defined as follows.


- Oxidation: An increase in oxidation state
- Reduction: A decrease in oxidation state

We discuss how to balance redox reactions in Section 19.2.

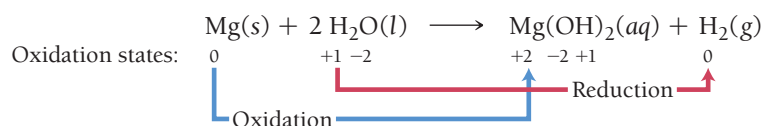
Remember that a reduction is a *reduction* in oxidation state.

EXAMPLE 8.16**Using Oxidation States to Identify Oxidation and Reduction**

Use oxidation states to identify the element that is oxidized and the element that is reduced in the redox reaction.

**SOLUTION**

Begin by assigning an oxidation state to each atom in the reaction.



Since Mg increases in the oxidation state, it is oxidized. Since H decreases in the oxidation state, it is reduced.

FOR PRACTICE 8.16

Use oxidation states to identify the element that is oxidized and the element that is reduced in the redox reaction.

**FOR MORE PRACTICE 8.16**

Determine whether or not each reaction is a redox reaction. If the reaction is a redox reaction, identify which element is oxidized and which is reduced.

- $\text{Hg}_2(\text{NO}_3)_2\text{(aq)} + 2 \text{KBr(aq)} \longrightarrow \text{Hg}_2\text{Br}_2\text{(s)} + 2 \text{KNO}_3\text{(aq)}$
- $4 \text{Al(s)} + 3 \text{O}_2\text{(g)} \longrightarrow 2 \text{Al}_2\text{O}_3\text{(s)}$
- $\text{CaO(s)} + \text{CO}_2\text{(g)} \longrightarrow \text{CaCO}_3\text{(s)}$

Notice that *oxidation and reduction must occur together*. If one substance loses electrons (oxidation), then another substance must gain electrons (reduction). A substance that causes the oxidation of another substance is an **oxidizing agent**. Oxygen, for example, is an excellent oxidizing agent because it causes the oxidation of many substances. In a redox reaction, *the oxidizing agent is always reduced*. A substance that causes the reduction of another substance is a **reducing agent**. Hydrogen, for example, as well as the group 1A and group 2A metals (because of their tendency to lose electrons) are excellent reducing agents. In a redox reaction, *the reducing agent is always oxidized*.

In Section 19.2, we will further discuss redox reactions, including how to balance them. For now, you need to be able to identify redox reactions, as well as oxidizing and reducing agents, according to the following guidelines.

Redox reactions

- Any reaction in which there is a change in the oxidation states of atoms in going from reactants to products.

In a redox reaction

- The oxidizing agent oxidizes another substance (and is itself reduced).
- The reducing agent reduces another substance (and is itself oxidized).

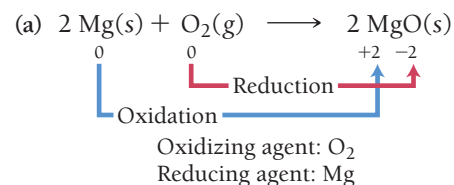
EXAMPLE 8.17**Identifying Redox Reactions, Oxidizing Agents, and Reducing Agents**

Determine whether or not each reaction is an oxidation–reduction reaction. For each oxidation–reduction reaction, identify the oxidizing agent and the reducing agent.

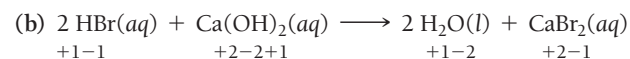
- (a) $2 \text{Mg(s)} + \text{O}_2\text{(g)} \longrightarrow 2 \text{MgO(s)}$
 (b) $2 \text{HBr(aq)} + \text{Ca(OH)}_2\text{(aq)} \longrightarrow 2 \text{H}_2\text{O(l)} + \text{CaBr}_2\text{(aq)}$
 (c) $\text{Zn(s)} + \text{Fe}^{2+}\text{(aq)} \longrightarrow \text{Zn}^{2+}\text{(aq)} + \text{Fe(s)}$

SOLUTION

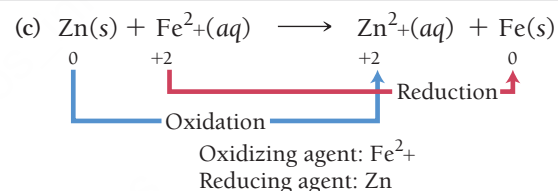
This is a redox reaction because magnesium increases in oxidation number (oxidation) and oxygen decreases in oxidation number (reduction).



This is not a redox reaction because none of the atoms undergoes a change in oxidation number.



This is a redox reaction because zinc increases in oxidation number (oxidation) and iron decreases in oxidation number (reduction).

**FOR PRACTICE 8.17**

Determine whether or not each reaction is a redox reaction. For redox reactions, identify the oxidizing agent and the reducing agent.

- (a) $2 \text{Li(s)} + \text{Cl}_2\text{(g)} \longrightarrow 2 \text{LiCl(s)}$
 (b) $2 \text{Al(s)} + 3 \text{Sn}^{2+}\text{(aq)} \longrightarrow 2 \text{Al}^{3+}\text{(aq)} + 3 \text{Sn(s)}$
 (c) $\text{Pb(NO}_3)_2\text{(aq)} + 2 \text{LiCl(aq)} \longrightarrow \text{PbCl}_2\text{(s)} + 2 \text{LiNO}_3\text{(aq)}$
 (d) $\text{C(s)} + \text{O}_2\text{(g)} \longrightarrow \text{CO}_2\text{(g)}$

Oxidation and Reduction**8.6**

Conceptual
Connection



Which statement is true?

- (a) A redox reaction involves *either* the transfer of an electron *or* a change in the oxidation state of an element.
 (b) If any of the reactants or products in a reaction contain oxygen, the reaction is a redox reaction.
 (c) In a reaction, oxidation can occur independently of reduction.
 (d) In a redox reaction, any increase in the oxidation state of a reactant must be accompanied by a decrease in the oxidation state of a reactant.

The Activity Series: Predicting Whether a Redox Reaction Is Spontaneous Is there a way to predict whether a particular redox reaction will spontaneously occur? Suppose we knew that substance A has a greater tendency to lose electrons than substance B. (In other words, A is more easily oxidized than B.) Then we could predict that if we mix A with cations of B, a redox reaction would occur in which A loses its electrons (A is oxidized) to the cations of B (B cations are reduced). For example, Mg has a greater tendency to lose electrons than Cu. Consequently, if we put solid Mg into a solution containing Cu^{2+} ions, Mg is oxidized and Cu^{2+} is reduced.




We see this as the fading of blue (the color of the Cu^{2+} ions in solution), the dissolving of the solid magnesium, and the appearance of solid copper on the remaining magnesium surface (**Figure 8.24 ▼**). This reaction is spontaneous—it occurs on its own when Mg(s) and $\text{Cu}^{2+}(\text{aq})$ come into contact. On the other hand, if we put Cu(s) in a solution containing $\text{Mg}^{2+}(\text{aq})$ ions, no reaction occurs (**Figure 8.25 ▼**).




No reaction occurs because, as noted previously, Mg atoms have a greater tendency to lose electrons than do Cu atoms; Cu atoms will therefore not lose electrons to Mg^{2+} ions.

Table 8.4 shows the **activity series of metals**. This table lists metals in order of decreasing tendency to lose electrons. The metals at the top of the list have the greatest tendency to lose electrons—they are most easily oxidized and therefore the most reactive. The metals at the bottom of the list have the lowest tendency to lose electrons—they are the most difficult to oxidize and therefore the least reactive. It is not a coincidence that the metals used for jewelry, such as silver and gold, are near the bottom of the list. They are among the least reactive metals and therefore do not form compounds easily. Instead, they tend to remain as solid silver and solid gold rather than being oxidized to silver and gold cations by elements in the environment (such as the oxygen in the air).




▲ FIGURE 8.24 Cu^{2+} Oxidizes Magnesium When we put a magnesium strip into a Cu^{2+} solution, the magnesium is oxidized to Mg^{2+} and the copper ion is reduced to Cu(s) . Notice the fading of the blue color (due to Cu^{2+} ions) in solution and the appearance of solid copper on the magnesium strip.



▲ FIGURE 8.25 Mg^{2+} Does Not Oxidize Copper When we place solid copper in a solution containing Mg^{2+} ions, no reaction occurs.

TABLE 8.4 Activity Series of Metals

$\text{Li(s)} \longrightarrow \text{Li}^+(\text{aq}) + \text{e}^-$	Most reactive
$\text{K(s)} \longrightarrow \text{K}^+(\text{aq}) + \text{e}^-$	Most easily oxidized
$\text{Ca(s)} \longrightarrow \text{Ca}^{2+}(\text{aq}) + 2 \text{e}^-$	Strongest tendency to lose electrons 
$\text{Na(s)} \longrightarrow \text{Na}^+(\text{aq}) + \text{e}^-$	
$\text{Mg(s)} \longrightarrow \text{Mg}^{2+}(\text{aq}) + 2 \text{e}^-$	
$\text{Al(s)} \longrightarrow \text{Al}^{3+}(\text{aq}) + 3 \text{e}^-$	
$\text{Mn(s)} \longrightarrow \text{Mn}^{2+}(\text{aq}) + 2 \text{e}^-$	
$\text{Zn(s)} \longrightarrow \text{Zn}^{2+}(\text{aq}) + 2 \text{e}^-$	
$\text{Cr(s)} \longrightarrow \text{Cr}^{3+}(\text{aq}) + 3 \text{e}^-$	
$\text{Fe(s)} \longrightarrow \text{Fe}^{2+}(\text{aq}) + 2 \text{e}^-$	
$\text{Ni(s)} \longrightarrow \text{Ni}^{2+}(\text{aq}) + 2 \text{e}^-$	
$\text{Sn(s)} \longrightarrow \text{Sn}^{2+}(\text{aq}) + 2 \text{e}^-$	
$\text{Pb(s)} \longrightarrow \text{Pb}^{2+}(\text{aq}) + 2 \text{e}^-$	Least reactive
$\text{H}_2(\text{g}) \longrightarrow 2 \text{H}^+(\text{aq}) + 2 \text{e}^-$	
$\text{Cu(s)} \longrightarrow \text{Cu}^{2+}(\text{aq}) + 2 \text{e}^-$	
$\text{Ag(s)} \longrightarrow \text{Ag}^+(\text{aq}) + \text{e}^-$	
$\text{Au(s)} \longrightarrow \text{Au}^{3+}(\text{aq}) + 3 \text{e}^-$	Most difficult to oxidize
	Least tendency to lose electrons

Each reaction in the activity series is an oxidation *half-reaction*. The half-reactions at the top are most likely to occur in the *forward* direction, and the half-reactions at the bottom are most likely to occur in the *reverse* direction. Consequently, if we pair a half-reaction from the top of the list with the reverse of a half-reaction from the bottom of the list, we get a spontaneous reaction. More specifically, any half-reaction on the list is spontaneous when paired with the reverse of any half-reaction below it on the list.



▲ Gold is very low on the activity series. Because it is so difficult to oxidize, it resists the tarnishing and corrosion that more active metals undergo.

Activity Series

Which metal is most easily oxidized?
(a) Na (b) Cr (c) Au

8.7

Cc

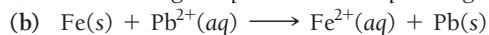
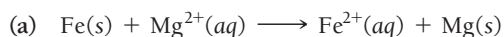
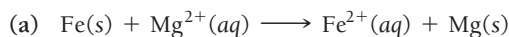
Conceptual Connection

PEARSON

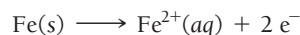
eText 2.0

EXAMPLE 8.18**Predicting Spontaneous Redox Reactions**

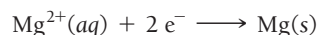
Determine whether each redox reaction is spontaneous:

**SOLUTION**

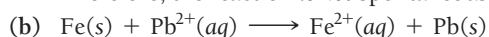
This reaction involves the oxidation of Fe:



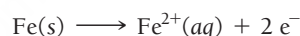
with the reverse of a half-reaction *above it* in the activity series:



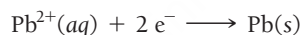
Therefore, the reaction is *not* spontaneous.



This reaction involves the oxidation of Fe:



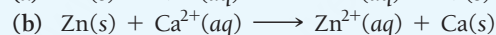
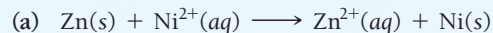
with the reverse of a half-reaction *below it* in the activity series:



Therefore, the reaction is spontaneous.

FOR PRACTICE 8.18

Determine whether each redox reaction is spontaneous.

**SELF-ASSESSMENT****QUIZ**

- What is the molarity of a solution containing 55.8 g of MgCl_2 dissolved in 1.00 L of solution?
a) 55.8 M b) 1.71 M c) 0.586 M d) 0.558 M
- What mass (in grams) of $\text{Mg}(\text{NO}_3)_2$ is present in 145 mL of a 0.150 M solution of $\text{Mg}(\text{NO}_3)_2$?
a) 3.23 g b) 0.0220 g c) 1.88 g d) 143 g
- What volume of a 1.50 M HCl solution should you use to prepare 2.00 L of a 0.100 M HCl solution?
a) 0.300 L b) 0.133 L c) 30.0 L d) 2.00 L
- Potassium iodide reacts with lead(II) nitrate in this precipitation reaction:
$$2\text{KI(aq)} + \text{Pb}(\text{NO}_3)_2(\text{aq}) \longrightarrow 2\text{KNO}_3(\text{aq}) + \text{PbI}_2(\text{s})$$

What minimum volume of 0.200 M potassium iodide solution is required to completely precipitate all of the lead in 155.0 mL of a 0.112 M lead(II) nitrate solution?
a) 348 mL b) 86.8 mL c) 174 mL d) 43.4 mL
- Which solution forms a precipitate when mixed with a solution of aqueous Na_2CO_3 ?
a) $\text{KNO}_3(\text{aq})$ b) NaBr(aq)
c) $\text{NH}_4\text{Cl(aq)}$ d) $\text{CuCl}_2(\text{aq})$
- What is the net ionic equation for the reaction that occurs when you mix aqueous solutions of KOH and SrCl_2 ?
a) $\text{K}^+(\text{aq}) + \text{Cl}^-(\text{aq}) \longrightarrow \text{KCl(s)}$
b) $\text{Sr}^{2+}(\text{aq}) + 2\text{OH}^-(\text{aq}) \longrightarrow \text{Sr}(\text{OH})_2(\text{s})$
c) $\text{H}^+(\text{aq}) + \text{OH}^-(\text{aq}) \longrightarrow \text{H}_2\text{O(l)}$
d) None of the above because no reaction occurs.
- What is the net ionic equation for the reaction that occurs when you mix aqueous solutions of KOH and HNO_3 ?
a) $\text{K}^+(\text{aq}) + \text{NO}_3^-(\text{aq}) \longrightarrow \text{KNO}_3(\text{s})$
b) $\text{NO}_3^-(\text{aq}) + \text{OH}^-(\text{aq}) \longrightarrow \text{NO}_3\text{OH(s)}$
c) $\text{H}^+(\text{aq}) + \text{OH}^-(\text{aq}) \longrightarrow \text{H}_2\text{O(l)}$
d) None of the above because no reaction occurs.

8. What is the net ionic equation for the reaction that occurs when you mix aqueous solutions of KHCO_3 and $\text{HC}_2\text{H}_3\text{O}_2$?
- $\text{K}^+(\text{aq}) + \text{C}_2\text{H}_3\text{O}_2^-(\text{aq}) \longrightarrow \text{KC}_2\text{H}_3\text{O}_2(\text{s})$
 - $\text{HCO}_3^-(\text{aq}) + \text{HC}_2\text{H}_3\text{O}_2(\text{aq}) \longrightarrow \text{H}_2\text{O}(\text{l}) + \text{CO}_2(\text{g}) + \text{C}_2\text{H}_3\text{O}_2^-(\text{aq})$
 - $\text{H}^+(\text{aq}) + \text{OH}^-(\text{aq}) \longrightarrow \text{H}_2\text{O}(\text{l})$
 - None of the above because no reaction occurs
9. What is the oxidation state of carbon in CO_3^{2-} ?
- +4
 - +3
 - 3
 - 2
10. Sodium reacts with water according to the reaction:
- $$2 \text{Na}(\text{s}) + 2 \text{H}_2\text{O}(\text{l}) \longrightarrow 2 \text{NaOH}(\text{aq}) + \text{H}_2(\text{g})$$
- Identify the oxidizing agent.
- $\text{Na}(\text{s})$
 - $\text{H}_2\text{O}(\text{l})$
 - $\text{NaOH}(\text{aq})$
 - $\text{H}_2(\text{g})$
11. Name the compound $\text{HNO}_2(\text{aq})$.
- Hydrogen nitrogen dioxide
 - Hydrogen nitrate
 - Nitric acid
 - Nitrous acid
12. Which of these ions will spontaneously react with $\text{Ni}(\text{s})$ in solution?
- $\text{Cu}^{2+}(\text{aq})$
 - $\text{Zn}^{2+}(\text{aq})$
 - $\text{Mg}^{2+}(\text{aq})$
 - $\text{K}^+(\text{aq})$

Answers: 1. c; 2. a; 3. b; 4. c; 5. d; 6. b; 7. c; 8. b; 9. a; 10. b; 11. d; 12. a

CHAPTER SUMMARY 8

MasteringChemistry™ provides end-of-chapter exercises, feedback-enriched tutorial problems, animations, and interactive activities to encourage problem solving practice and deeper understanding of key concepts and topics.

REVIEW

KEY LEARNING OUTCOMES

CHAPTER OBJECTIVES	ASSESSMENT
Calculate and Use Molarity as a Conversion Factor (8.2)	• Examples 8.1, 8.2 For Practice 8.1, 8.2 For More Practice 8.1, 8.2 Exercises 21–28
Determine Solution Dilutions (8.2)	• Example 8.3 For Practice 8.3 For More Practice 8.3 Exercises 29–32
Use Solution Stoichiometry to Find Volumes and Amounts (8.3)	• Example 8.4 For Practice 8.4 For More Practice 8.4 Exercises 33–38
Predict Compound Solubility (8.4)	• Example 8.5 For Practice 8.5 Exercises 39–42
Write Equations for Precipitation Reactions (8.5)	• Examples 8.6, 8.7 For Practice 8.6, 8.7 Exercises 43–46
Write Complete Ionic and Net Ionic Equations (8.6)	• Example 8.8 For Practice 8.8 For More Practice 8.8 Exercises 47–50
Name Acids (8.7)	• Examples 8.9, 8.10 For Practice 8.9, 8.10 For More Practice 8.10 Exercises 51–54
Write Equations for Acid–Base Reactions (8.7)	• Examples 8.11, 8.12 For Practice 8.11, 8.12 Exercises 55–60
Solve Calculations Involving Acid–Base Titrations (8.7)	• Example 8.13 For Practice 8.13 For More Practice 8.13 Exercises 61, 62
Write Equations for Gas-Evolution Reactions (8.8)	• Example 8.14 For Practice 8.14 For More Practice 8.14 Exercises 63–66
Assign Oxidation States (8.9)	• Example 8.15 For Practice 8.15 Exercises 67–70
Identify Redox Reactions, Oxidizing Agents, and Reducing Agents Using Oxidation States (8.9)	• Examples 8.16, 8.17 For Practice 8.16, 8.17 For More Practice 8.16 Exercises 71, 72
Predict the Spontaneity of Redox Reactons (8.9)	• Example 8.18 For Practice 8.18 Exercises 73–78

KEY TERMS

Section 8.2

solution (320)
 solvent (320)
 solute (320)
 aqueous solution (320)
 dilute solution (320)
 concentrated solution (320)
 molarity (M) (320)
 stock solution (322)

Section 8.4

electrolyte (328)
 strong electrolyte (328)
 nonelectrolyte (328)
 acid (329)

strong acid (329)
 weak acid (329)
 weak electrolyte (329)
 soluble (329)
 insoluble (329)

Section 8.5

precipitation reaction (331)
 precipitate (331)

Section 8.6

molecular equation (336)
 complete ionic equation (336)
 spectator ion (336)
 net ionic equation (336)

Section 8.7

acid–base reaction (neutralization reaction) (337)
 Arrhenius definitions (of acid and bases) (338)
 hydronium ion (338)
 polyprotic acid (338)
 diprotic acid (338)
 base (338)
 binary acid (339)
 oxyacid (340)
 salt (342)
 titration (343)
 equivalence point (343)
 indicator (344)

Section 8.8

gas-evolution reaction (346)

Section 8.9

oxidation–reduction (redox) reaction (347)
 oxidation (347)
 reduction (349)
 oxidation state (oxidation number) (349)
 oxidizing agent (352)
 reducing agent (352)
 activity series of metals (354)

KEY CONCEPTS

Solution Concentration (8.2)

- An aqueous solution is a homogeneous mixture of water (the solvent) with another substance (the solute).
- We often express the concentration of a solution in molarity, the number of moles of solute per liter of solution.

Solution Stoichiometry (8.3)

- We can use the molarities and volumes of reactant solutions to predict the amount of product that will form in an aqueous reaction or the amount of one reactant needed to react with a given amount of another reactant.

Aqueous Solutions and Precipitation Reactions (8.4, 8.5)

- Solutes that completely dissociate (or completely ionize in the case of the strong acids) to ions in solution are strong electrolytes and are good conductors of electricity. Water-soluble ionic compounds, strong acids and strong bases are strong electrolytes.
- Solutes that only partially dissociate (or partially ionize) are weak electrolytes. Weak acids are weak electrolytes.
- Solutes that do not dissociate (or ionize) are nonelectrolytes.
- A substance that dissolves in water to form a solution is soluble.
- The solubility rules are an empirical set of guidelines that help predict the solubilities of ionic compounds; these rules are especially useful when determining whether or not a precipitate forms.
- In a precipitation reaction, we mix two aqueous solutions and a solid—a precipitate—forms.

Equations for Aqueous Reactions (8.6)

- We can represent an aqueous reaction with a molecular equation, which shows the complete neutral formula for each compound in the reaction.
- We can also represent an aqueous reaction with a complete ionic equation, which shows the dissociated nature of the aqueous ionic compounds.

- A third representation of an aqueous reaction is the net ionic equation, in which the spectator ions—those that do not change in the course of the reaction—are left out of the equation.

Acid–Base Reactions (8.7)

- In an acid–base reaction, an acid, a substance that produces H^+ in solution, reacts with a base, a substance that produces OH^- in solution, and the two neutralize each other, producing water (or in some cases a weak electrolyte).
- An acid–base titration is a laboratory procedure in which a reaction is carried to its equivalence point—the point at which the reactants are in exact stoichiometric proportions; titrations are useful in determining the concentrations of unknown solutions.

Gas-Evolution Reactions (8.8)

- In gas-evolution reactions, two aqueous solutions combine and a gas is produced.

Oxidation–Reduction Reactions (8.9)

- In oxidation–reduction reactions, one substance transfers electrons to another substance.
- The substance that loses electrons is oxidized, and the substance that gains electrons is reduced.
- An oxidation state is a fictitious charge given to each atom in a redox reaction by assigning all shared electrons to the atom with the greater attraction for those electrons. Oxidation states are an imposed electronic bookkeeping scheme, not an actual physical state.
- The oxidation state of an atom increases upon oxidation and decreases upon reduction.
- The activity series of metals can be used to predict spontaneous redox reaction. Any half-reaction in the series is spontaneous when paired with any reverse half-reaction below it.

KEY EQUATIONS AND RELATIONSHIPS

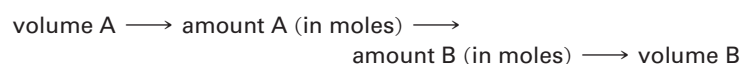
Molarity (M): Solution Concentration (8.2)

$$M = \frac{\text{amount of solute (in mol)}}{\text{volume of solution (in L)}}$$

Solution Dilution (8.2)

$$M_1 V_1 = M_2 V_2$$

Solution Stoichiometry (8.3)



EXERCISES

REVIEW QUESTIONS

1. What is an aqueous solution? What is the difference between the solute and the solvent?
2. What is molarity? How is it useful?
3. Explain how a strong electrolyte, a weak electrolyte, and a nonelectrolyte differ.
4. What is an acid? Explain the difference between a strong acid and a weak acid.
5. What does it mean for a compound to be soluble? Insoluble?
6. What are the solubility rules? How are they useful?
7. Which cations and anions form compounds that are usually soluble? What are the exceptions? Which anions form compounds that are mostly insoluble? What are the exceptions?
8. What is a precipitation reaction? Give an example.
9. How can you predict whether a precipitation reaction will occur upon mixing two aqueous solutions?
10. Explain how a molecular equation, a complete ionic equation, and a net ionic equation differ.
11. What is the Arrhenius definition of a base?
12. Explain how to name binary acids and oxyacids.
13. What is an acid–base reaction? Provide an example.
14. Explain the principles behind an acid–base titration. What is an indicator?
15. What is a gas-evolution reaction? Provide an example.
16. Which reactant types give rise to gas-evolution reactions?
17. What is an oxidation–reduction reaction? Provide an example.
18. What are oxidation states? How can oxidation states be used to identify redox reactions?
19. What happens to a substance when it becomes oxidized? Reduced?
20. In a redox reaction, which reactant is the oxidizing agent? The reducing agent?

PROBLEMS BY TOPIC

Note: Answers to all odd-numbered Problems, numbered in blue, can be found in Appendix III. Exercises in the Problems by Topic section are paired, with each odd-numbered problem followed by a similar even-numbered problem. Exercises in the Cumulative Problems section are also paired but somewhat more loosely. Because of their nature, Challenge Problems and Conceptual Problems, are unpaired.

Solution Concentration and Solution Stoichiometry

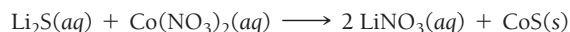
21. Calculate the molarity of each solution.
 - a. 3.25 mol of LiCl in 2.78 L solution
 - b. 28.33 g $\text{C}_6\text{H}_{12}\text{O}_6$ in 1.28 L of solution
 - c. 32.4 mg NaCl in 122.4 mL of solution
22. Calculate the molarity of each solution.
 - a. 0.38 mol of LiNO_3 in 6.14 L of solution
 - b. 72.8 g $\text{C}_2\text{H}_6\text{O}$ in 2.34 L of solution
 - c. 12.87 mg KI in 112.4 mL of solution
23. What is the molarity of NO_3^- in each solution?
 - a. 0.150 M KNO_3
 - b. 0.150 M $\text{Ca}(\text{NO}_3)_2$
 - c. 0.150 M $\text{Al}(\text{NO}_3)_3$
24. What is the molarity of Cl^- in each solution?
 - a. 0.200 M NaCl
 - b. 0.150 M SrCl_2
 - c. 0.100 M AlCl_3
25. How many moles of KCl are contained in each solution?
 - a. 0.556 L of a 2.3 M KCl solution
 - b. 1.8 L of a 0.85 M KCl solution
 - c. 114 mL of a 1.85 M KCl solution
26. What volume of 0.200 M ethanol solution contains each of the following amounts?
 - a. 0.45 mol ethanol
 - b. 1.22 mol ethanol
 - c. 1.2×10^{-2} mol ethanol
27. A laboratory procedure calls for making 400.0 mL of a 1.1 M NaNO_3 solution. What mass of NaNO_3 (in g) do you need?
28. A chemist wants to make 5.5 L of a 0.300 M CaCl_2 solution. What mass of CaCl_2 (in g) should the chemist use?
29. If 123 mL of a 1.1 M glucose solution is diluted to 500.0 mL, what is the molarity of the diluted solution?
30. If 3.5 L of a 4.8 M SrCl_2 solution is diluted to 45 L, what is the molarity of the diluted solution?
31. To what volume should you dilute 50.0 mL of a 12 M stock HNO_3 solution to obtain a 0.100 M HNO_3 solution?
32. To what volume should you dilute 25 mL of a 10.0 M H_2SO_4 solution to obtain a 0.150 M H_2SO_4 solution?

33. Consider the precipitation reaction:



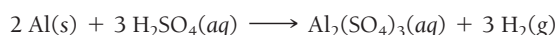
What volume of 0.175 M Na_3PO_4 solution is necessary to completely react with 95.4 mL of 0.102 M CuCl_2 ?

34. Consider the reaction:



What volume of 0.150 M Li_2S solution is required to completely react with 125 mL of 0.150 M $\text{Co}(\text{NO}_3)_2$?

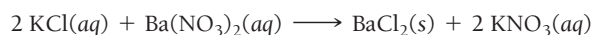
35. What is the minimum amount of 6.0 M H_2SO_4 necessary to produce 25.0 g of $\text{H}_2(g)$ according to the reaction between aluminum and sulfuric acid?



36. What molarity of ZnCl_2 forms when 25.0 g of zinc completely reacts with CuCl_2 according to the following reaction? Assume a final volume of 275 mL.

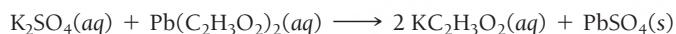


37. You mix a 25.0 mL sample of a 1.20 M potassium chloride solution with 15.0 mL of a 0.900 M barium nitrate solution, and this precipitation reaction occurs:



You collect and dry the solid BaCl_2 and find it has a mass of 2.45 g. Determine the limiting reactant, the theoretical yield, and the percent yield.

38. You mix a 55.0 mL sample of a 0.102 M potassium sulfate solution with 35.0 mL of a 0.114 M lead acetate solution, and this precipitation reaction occurs:



You collect and dry the solid PbSO_4 and find it has a mass of 1.01 g. Determine the limiting reactant, the theoretical yield, and the percent yield.

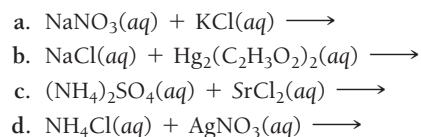
Types of Aqueous Solutions and Solubility

39. For each compound (all water soluble), would you expect the resulting aqueous solution to conduct electrical current?
a. CsCl b. CH_3OH c. $\text{Ca}(\text{NO}_2)_2$ d. $\text{C}_6\text{H}_{12}\text{O}_6$
40. Classify each compound as a strong electrolyte or nonelectrolyte.
a. MgBr_2 b. $\text{C}_{12}\text{H}_{22}\text{O}_{11}$ c. Na_2CO_3 d. KOH
41. Determine whether each compound is soluble or insoluble. If the compound is soluble, list the ions present in solution.
a. AgNO_3 b. $\text{Pb}(\text{C}_2\text{H}_3\text{O}_2)_2$ c. KNO_3 d. $(\text{NH}_4)_2\text{S}$
42. Determine whether each compound is soluble or insoluble. For the soluble compounds, list the ions present in solution.
a. AgI b. $\text{Cu}_3(\text{PO}_4)_2$ c. CoCO_3 d. K_3PO_4

Precipitation Reactions

43. Complete and balance each equation. If no reaction occurs, write NO REACTION.
a. $\text{LiI}(aq) + \text{BaS}(aq) \longrightarrow$
b. $\text{KCl}(aq) + \text{CaS}(aq) \longrightarrow$
c. $\text{CrBr}_2(aq) + \text{Na}_2\text{CO}_3(aq) \longrightarrow$
d. $\text{NaOH}(aq) + \text{FeCl}_3(aq) \longrightarrow$

44. Complete and balance each equation. If no reaction occurs, write NO REACTION.



45. Write a molecular equation for the precipitation reaction that occurs (if any) when each pair of aqueous solutions is mixed. If no reaction occurs, write NO REACTION.

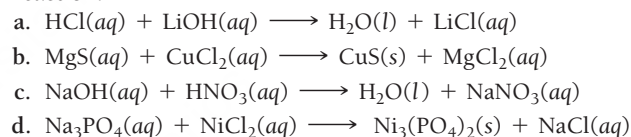
- a. potassium carbonate and lead(II) nitrate
b. lithium sulfate and lead(II) acetate
c. copper(II) nitrate and magnesium sulfide
d. strontium nitrate and potassium iodide

46. Write a molecular equation for the precipitation reaction that occurs (if any) when each pair of aqueous solutions is mixed. If no reaction occurs, write NO REACTION.

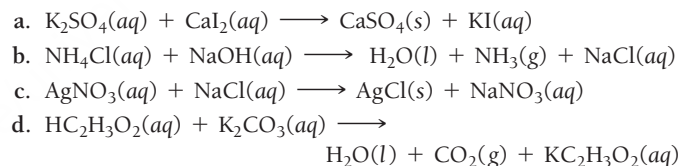
- a. sodium chloride and lead(II) acetate
b. potassium sulfate and strontium iodide
c. cesium chloride and calcium sulfide
d. chromium(III) nitrate and sodium phosphate

Ionic and Net Ionic Equations

47. Write balanced complete ionic and net ionic equations for each reaction.



48. Write balanced complete ionic and net ionic equations for each reaction.



49. Mercury ions (Hg_2^{2+}) can be removed from solution by precipitation with Cl^- . Suppose that a solution contains aqueous $\text{Hg}_2(\text{NO}_3)_2$. Write complete ionic and net ionic equations to show the reaction of aqueous $\text{Hg}_2(\text{NO}_3)_2$ with aqueous sodium chloride to form solid Hg_2Cl_2 and aqueous sodium nitrate.

50. Lead ions can be removed from solution by precipitation with sulfate ions. Suppose that a solution contains lead(II) nitrate. Write complete ionic and net ionic equations to show the reaction of aqueous lead(II) nitrate with aqueous potassium sulfate to form solid lead(II) sulfate and aqueous potassium nitrate.

Naming Acids

51. Name each acid.
a. $\text{HI}(aq)$
b. $\text{HNO}_3(aq)$
c. $\text{H}_2\text{CO}_3(aq)$
52. Name each acid.
a. $\text{HCl}(aq)$
b. $\text{HClO}_2(aq)$
c. $\text{H}_2\text{SO}_4(aq)$

53. Provide the formula for each acid.
- hydrofluoric acid
 - hydrobromic acid
 - sulfurous acid
54. Provide the formula for each acid.
- phosphoric acid
 - hydrocyanic acid
 - chlorous acid

Acid–Base Reactions

55. Write balanced molecular and net ionic equations for the reaction between hydrobromic acid and potassium hydroxide.
56. Write balanced molecular and net ionic equations for the reaction between nitric acid and calcium hydroxide.
57. Complete and balance each acid–base equation.
- $\text{H}_2\text{SO}_4(aq) + \text{Ca}(\text{OH})_2(aq) \longrightarrow$
 - $\text{HClO}_4(aq) + \text{KOH}(aq) \longrightarrow$
 - $\text{H}_2\text{SO}_4(aq) + \text{NaOH}(aq) \longrightarrow$
58. Complete and balance each acid–base equation.
- $\text{HI}(aq) + \text{LiOH}(aq) \longrightarrow$
 - $\text{HC}_2\text{H}_3\text{O}_2(aq) + \text{Ca}(\text{OH})_2(aq) \longrightarrow$
 - $\text{HCl}(aq) + \text{Ba}(\text{OH})_2(aq) \longrightarrow$
59. Write balanced complete ionic and net ionic equations for each acid–base reaction.
- $\text{HBr}(aq) + \text{NaOH}(aq) \longrightarrow$
 - $\text{HF}(aq) + \text{NaOH}(aq) \longrightarrow$
 - $\text{HC}_2\text{H}_3\text{O}_2(aq) + \text{RbOH}(aq) \longrightarrow$
60. Write balanced complete ionic and net ionic equations for each acid–base reaction.
- $\text{HI}(aq) + \text{RbOH}(aq) \longrightarrow$
 - $\text{HCHO}_2(aq) + \text{NaOH}(aq) \longrightarrow$
 - $\text{HC}_2\text{H}_3\text{O}_2(aq) + \text{LiOH}(aq) \longrightarrow$
61. A 25.00-mL sample of an unknown HClO_4 solution requires titration with 22.62 mL of 0.2000 M NaOH to reach the equivalence point. What is the concentration of the unknown HClO_4 solution? The neutralization reaction is:
- $$\text{HClO}_4(aq) + \text{NaOH}(aq) \longrightarrow \text{H}_2\text{O}(l) + \text{NaClO}_4(aq)$$
62. A 30.00-mL sample of an unknown H_3PO_4 solution is titrated with a 0.100 M NaOH solution. The equivalence point is reached when 26.38 mL of NaOH solution is added. What is the concentration of the unknown H_3PO_4 solution? The neutralization reaction is:
- $$\text{H}_3\text{PO}_4(aq) + 3 \text{NaOH}(aq) \longrightarrow 3 \text{H}_2\text{O}(l) + \text{Na}_3\text{PO}_4(aq)$$

Gas-Evolution Reactions

63. Complete and balance each gas-evolution equation.
- $\text{HBr}(aq) + \text{NiS}(s) \longrightarrow$
 - $\text{NH}_4\text{I}(aq) + \text{NaOH}(aq) \longrightarrow$
 - $\text{HBr}(aq) + \text{Na}_2\text{S}(aq) \longrightarrow$
64. Complete and balance each gas-evolution equation.
- $\text{HCl}(aq) + \text{KHCO}_3(aq) \longrightarrow$
 - $\text{HC}_2\text{H}_3\text{O}_2(aq) + \text{NaHSO}_3(aq) \longrightarrow$
 - $(\text{NH}_4)_2\text{SO}_4(aq) + \text{Ca}(\text{OH})_2(aq) \longrightarrow$

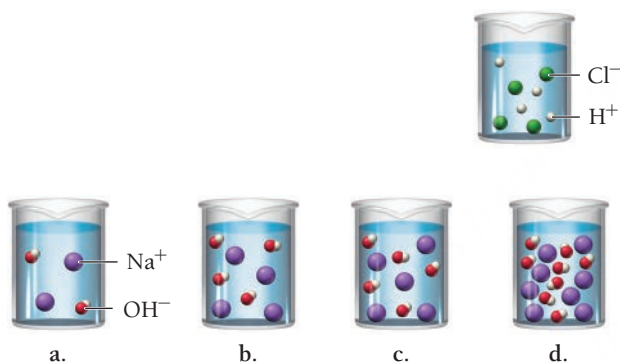
65. Write a balanced equation for the reaction between perchloric acid and lithium carbonate.
66. Write a balanced equation for the reaction between nitric acid and sodium sulfite.

Oxidation and Reduction

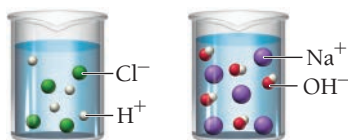
67. Assign oxidation states to each atom in each element, ion, or compound.
- Ag
 - Ag^+
 - CaF_2
 - H_2S
 - CO_3^{2-}
 - CrO_4^{2-}
68. Assign oxidation states to each atom in each element, ion, or compound.
- Cl_2
 - Fe^{3+}
 - CuCl_2
 - CH_4
 - $\text{Cr}_2\text{O}_7^{2-}$
 - HSO_4^-
69. What is the oxidation state of Cr in each compound?
- CrO
 - CrO₃
 - Cr₂O₃
70. What is the oxidation state of Cl in each ion?
- ClO^-
 - ClO_2^-
 - ClO_3^-
 - ClO_4^-
71. Determine whether or not each reaction is a redox reaction. For each redox reaction, identify the oxidizing agent and the reducing agent.
- $4 \text{Li}(s) + \text{O}_2(g) \longrightarrow 2 \text{Li}_2\text{O}(s)$
 - $\text{Mg}(s) + \text{Fe}^{2+}(aq) \longrightarrow \text{Mg}^{2+}(aq) + \text{Fe}(s)$
 - $\text{Pb}(\text{NO}_3)_2(aq) + \text{Na}_2\text{SO}_4(aq) \longrightarrow \text{PbSO}_4(s) + 2 \text{NaNO}_3(aq)$
 - $\text{HBr}(aq) + \text{KOH}(aq) \longrightarrow \text{H}_2\text{O}(l) + \text{KBr}(aq)$
72. Determine whether or not each reaction is a redox reaction. For each redox reaction, identify the oxidizing agent and the reducing agent.
- $\text{Al}(s) + 3 \text{Ag}^+(aq) \longrightarrow \text{Al}^{3+}(aq) + 3 \text{Ag}(s)$
 - $\text{SO}_3(g) + \text{H}_2\text{O}(l) \longrightarrow \text{H}_2\text{SO}_4(aq)$
 - $\text{Ba}(s) + \text{Cl}_2(g) \longrightarrow \text{BaCl}_2(s)$
 - $\text{Mg}(s) + \text{Br}_2(l) \longrightarrow \text{MgBr}_2(s)$
73. Determine whether each redox reaction occurs spontaneously in the forward direction.
- $\text{Ni}(s) + \text{Zn}^{2+}(aq) \longrightarrow \text{Ni}^{2+}(aq) + \text{Zn}(s)$
 - $\text{Ni}(s) + \text{Pb}^{2+}(aq) \longrightarrow \text{Ni}^{2+}(aq) + \text{Pb}(s)$
 - $\text{Al}(s) + 3 \text{Ag}^+(aq) \longrightarrow 3 \text{Al}^{3+}(aq) + \text{Ag}(s)$
 - $\text{Pb}(s) + \text{Mn}^{2+}(aq) \longrightarrow \text{Pb}^{2+}(aq) + \text{Mn}(s)$
74. Determine whether each redox reaction occurs spontaneously in the forward direction.
- $\text{Ca}^{2+}(aq) + \text{Zn}(s) \longrightarrow \text{Ca}(s) + \text{Zn}^{2+}(aq)$
 - $2 \text{Ag}^+(aq) + \text{Ni}(s) \longrightarrow 2 \text{Ag}(s) + \text{Ni}^{2+}(aq)$
 - $\text{Fe}(s) + \text{Mn}^{2+}(aq) \longrightarrow \text{Fe}^{2+}(aq) + \text{Mn}(s)$
 - $2 \text{Al}(s) + 3 \text{Pb}^{2+}(aq) \longrightarrow 2 \text{Al}^{3+}(aq) + 3 \text{Pb}(s)$
75. Suppose you wanted to cause Ni^{2+} ions to come out of solution as solid Ni. Which metal could you use to accomplish this?
76. Suppose you wanted to cause Pb^{2+} ions to come out of solution as solid Pb. Which metal could you use to accomplish this?
77. Which metal in the activity series reduces Al^{3+} ions but not Na^+ ions?
78. Which metal in the activity series is oxidized with a Ni^{2+} solution but not with a Cr^{3+} solution?

CUMULATIVE PROBLEMS

79. The density of a 20.0% by mass ethylene glycol ($\text{C}_2\text{H}_6\text{O}_2$) solution in water is 1.03 g/mL. Find the molarity of the solution.
80. Find the percent by mass of sodium chloride in a 1.35 M NaCl solution. The density of the solution is 1.05 g/mL.
81. People often use sodium bicarbonate as an antacid to neutralize excess hydrochloric acid in an upset stomach. What mass of hydrochloric acid (in grams) can 2.5 g of sodium bicarbonate neutralize? (*Hint*: Begin by writing a balanced equation for the reaction between aqueous sodium bicarbonate and aqueous hydrochloric acid.)
82. Toilet bowl cleaners often contain hydrochloric acid, which dissolves the calcium carbonate deposits that accumulate within a toilet bowl. What mass of calcium carbonate (in grams) can 3.8 g of HCl dissolve? (*Hint*: Begin by writing a balanced equation for the reaction between hydrochloric acid and calcium carbonate.)
83. A hydrochloric acid solution will neutralize a sodium hydroxide solution. Consider these molecular views of one beaker of HCl and four beakers of NaOH. Which NaOH beaker will just neutralize the HCl beaker? Begin by writing a balanced chemical equation for the neutralization reaction.



84. These two beakers represent solutions of HCl and NaOH. Draw a third beaker showing the ions that remain after the reaction has gone to completion.



85. Predict the products and write a balanced molecular equation for each reaction. If no reaction occurs, write NO REACTION.
- $\text{HCl}(aq) + \text{Hg}_2(\text{NO}_3)_2(aq) \longrightarrow$
 - $\text{KHSO}_3(aq) + \text{HNO}_3(aq) \longrightarrow$
 - aqueous ammonium chloride and aqueous lead(II) nitrate
 - aqueous ammonium chloride and aqueous calcium hydroxide
86. Predict the products and write a balanced molecular equation for each reaction. If no reaction occurs, write NO REACTION.
- $\text{H}_2\text{SO}_4(aq) + \text{HNO}_3(aq) \longrightarrow$
 - $\text{Cr}(\text{NO}_3)_3(aq) + \text{LiOH}(aq) \longrightarrow$
 - liquid pentanol ($\text{C}_5\text{H}_{12}\text{O}$) and gaseous oxygen
 - aqueous strontium sulfide and aqueous copper(II) sulfate
87. Hard water often contains dissolved Ca^{2+} and Mg^{2+} ions. One way to soften water is to add phosphates. The phosphate ion forms insoluble precipitates with calcium and magnesium ions, removing them from solution. A solution is 0.050 M in calcium chloride and 0.085 M in magnesium nitrate. What mass of sodium phosphate would have to be added to 1.5 L of this solution to completely eliminate the hard water ions? Assume a complete reaction.
88. An acid solution is 0.100 M in HCl and 0.200 M in H_2SO_4 . What volume of a 0.150 M KOH solution would completely neutralize all the acid in 500.0 mL of this solution?
89. Find the mass of barium metal (in grams) that must react with O_2 to produce enough barium oxide to prepare 1.0 L of a 0.10 M solution of OH^- . (*Hint*: Barium metal reacts with oxygen to form BaO; BaO reacts with water to form $\text{Ba}(\text{OH})_2$.)
90. A solution contains Cr^{3+} ion and Mg^{2+} ion. The addition of 1.00 L of 1.51 M NaF solution causes the complete precipitation of these ions as $\text{CrF}_3(s)$ and $\text{MgF}_2(s)$. The total mass of the precipitate is 49.6 g. Find the mass of Cr^{3+} in the original solution.
91. Find the volume of 0.110 M hydrochloric acid necessary to react completely with 1.52 g $\text{Al}(\text{OH})_3$.
92. Find the volume of 0.150 M sulfuric acid necessary to react completely with 75.3 g sodium hydroxide.
93. Treatment of gold metal with BrF_3 and KF produces Br_2 and KAuF_4 , a salt of gold. Identify the oxidizing agent and the reducing agent in this reaction. What mass of the gold salt forms when a 73.5-g mixture of equal masses of all three reactants is prepared?
94. We prepare a solution by mixing 0.10 L of 0.12 M sodium chloride with 0.23 L of a 0.18 M MgCl_2 solution. What volume of a 0.20 M silver nitrate solution do we need to precipitate all the Cl^- ion in the solution as AgCl?

CHALLENGE PROBLEMS

95. A solution contains Ag^+ and Hg^{2+} ions. The addition of 0.100 L of 1.22 M NaI solution is just enough to precipitate all the ions as AgI and HgI_2 . The total mass of the precipitate is 28.1 g. Find the mass of AgI in the precipitate.
96. The water in lakes that have been acidified by acid rain (HNO_3 and H_2SO_4) can be neutralized by a process called liming, in which limestone (CaCO_3) is added to the acidified water. What mass of limestone (in kg) will completely neutralize a 15.2 billion-liter lake that is 1.8×10^{-5} M in H_2SO_4 and 8.7×10^{-6} M in HNO_3 ?

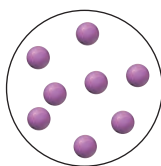
97. Recall from Section 8.5 that sodium carbonate is often added to laundry detergents to soften hard water and make the detergent more effective. Suppose that a particular detergent mixture is designed to soften hard water that is 3.5×10^{-3} M in Ca^{2+} and 1.1×10^{-3} M in Mg^{2+} and that the average capacity of a washing machine is 19.5 gallons of water. If 0.65 kg detergent is required per load of laundry, what percentage (by mass) of the detergent should be sodium carbonate in order to completely precipitate all of the calcium and magnesium ions in an average load of laundry water?

98. A solution contains one or more of the following ions: Ag^+ , Ca^{2+} , and Cu^{2+} . When you add sodium chloride to the solution, no precipitate forms. When you add sodium sulfate to the solution, a white precipitate forms. You filter off the precipitate and add sodium carbonate to the remaining solution, producing another precipitate. Which ions were present in the original solution? Write net ionic equations for the formation of each of the precipitates observed.

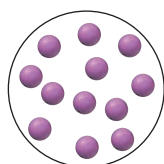
99. A solution contains one or more of the following ions: Hg_2^{2+} , Ba^{2+} , and Fe^{2+} . When potassium chloride is added to the solution, a precipitate forms. The precipitate is filtered off, and potassium sulfate is added to the remaining solution, producing no precipitate. When potassium carbonate is added to the remaining solution, a precipitate forms. Which ions were present in the original solution? Write net ionic equations for the formation of each of the precipitates observed.

CONCEPTUAL PROBLEMS

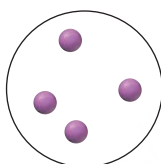
100. The circle shown here represents 1.0 L of a solution with a solute concentration of 1 M:



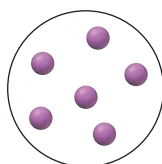
Explain what you would add (the amount of solute or volume of solvent) to the solution to obtain a solution represented by each diagram:



a.

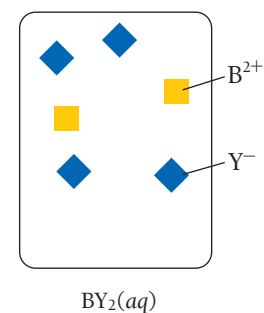
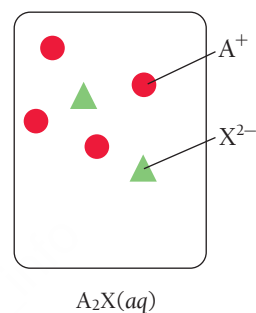


b.



c.

101. Consider the generic ionic compounds with the formulas A_2X and BY_2 and the following solubility rules: A_2X soluble; BY_2 soluble; AY insoluble; BX soluble. Let circles represent A^+ ions, squares represent B^{2+} ions, triangles represent X^{2-} ions, and diamonds represent Y^- ions. Solutions of the two compounds (A_2X and BY_2) can be represented as follows:



Draw a molecular-level representation showing the result of mixing the two solutions (A_2X and BY_2) and write an equation to represent the reaction.

102. If you dissolve 27 g of sugar into 155 mL of water, what can you conclude about the mass and volume of the resulting solution? Assume a density of 1.00 g/mL for the water.
- mass = 155 g; volume = 155 mL
 - mass = 182 g; volume = 155 mL
 - mass = 182 g; volume > 155 mL
 - mass = 155 g; volume > 155 mL
103. Explain the difference between the charge of an ion, such as a charge of $2-$ for an O^{2-} ion, and the oxidation state of an atom, such as the -4 oxidation state of carbon in CH_4 .

QUESTIONS FOR GROUP WORK

Discuss these questions with the group and record your consensus answer.

104. Write a detailed set of instructions for making two solutions: (1) 100.0 mL of 12-M NaOH from solid sodium hydroxide and (2) 1.00 L of 0.1 M NaOH from your first solution. You have in your lab: volumetric flasks marked to contain 100.0 mL and 1.000 L, a graduated cylinder, and a balance.
105. Review the solubility rules. Without referring back to the rules, have each group member list two ionic compounds that are expected to be soluble and two that are expected to be insoluble.

Include at least one exception. Check the work of the other members of your group.

106. Define and give an example of each of the following classes of reactions: precipitation, acid–base, gas evolution, redox (non-combustion), and combustion. Each group member can do one and then present the reaction to the group.
107. Using group members to represent atoms, ions, or electrons, act out the reaction $\text{Zn}(\text{s}) + \text{Fe}^{2+}(\text{aq}) \longrightarrow \text{Zn}^{2+}(\text{aq}) + \text{Fe}(\text{s})$. Which group member is oxidized? Which is reduced? Which is the oxidizing agent? Which is the reducing agent?

Active Classroom Learning

DATA INTERPRETATION AND ANALYSIS

108. In April 2014, in an effort to save money, officials in Flint, Michigan, changed their water source from Lake Huron to the Flint River. In subsequent months, residents began complaining about the quality of the water, and General Motors (which has an engine plant in Flint) stopped using the water in manufacturing because of its corrosiveness. That corrosiveness was causing problems that would soon fuel a national outrage. The water flowed through pipes to taps in homes, and as it flowed through the pipes, many of which contained lead, the corrosive water became contaminated with lead. Routine monitoring of the tap water in select homes did not reveal the magnitude of the problem because samples were collected only after preflushing the tap (allowing the water to run for a time).

A Virginia Tech professor and his students began an independent test of the water coming from Flint’s taps and got much different results by analyzing the water that initially came from the taps (first draw). Their results—which showed elevated lead levels in the tap water—ultimately forced officials to switch back to the Lake Huron water source.

The following table shows a set of data collected by the Virginia Tech team. The lead levels in water are expressed in units of parts per billion (ppb). 1 ppb = 1 g Pb/10⁹ parts solution. Examine the data and answer the questions that follow.

- a. Determine the average value of lead for first draw, 45-second flush, and 2-minute flush (round to three significant figures).
- b. Do the data support the idea that running the tap water before taking a sample made the lead levels in the water appear lower? Why might this occur?
- c. The EPA requires water providers to monitor drinking water at customer taps. If lead concentrations exceed 15 ppm in 10% or more of the taps sampled, the water provider must notify the customer and take steps to control the corrosiveness of the water. If the water provider in Flint had used first-draw samples to monitor lead levels, would they have been required to take action by EPA requirements? If the Flint water provider used 2-min flush samples, would they have had to take action? Which drawing technique do you think more closely mimics the way residents actually use their water?
- d. Using the highest value of lead from the first-draw data set, and assuming a resident drinks 2 L of water per day, calculate the mass of lead that the resident would consume over the course of one year. (Assume the water has a density of 1.0 g/mL.)

Lead Levels in Samples of Flint Tap Water

Sample #	Lead Level 1 st draw (ppb)	Lead Level 45 sec flush (ppb)	Lead Level 2 min flush (ppb)
1	0.344	0.226	0.145
2	8.133	10.77	2.761
3	1.111	0.11	0.123
4	8.007	7.446	3.384
5	1.951	0.048	0.035
6	7.2	1.4	0.2
7	40.63	9.726	6.132
8	1.1	2.5	0.1
9	10.6	1.038	1.294
10	6.2	4.2	2.3
11	4.358	0.822	0.147
12	24.37	8.796	4.347
13	6.609	5.752	1.433
14	4.062	1.099	1.085
15	29.59	3.258	1.843

Source: FlintWaterStudy.org (2015) “Lead Results from Tap Water Sampling in Flint, Michigan, during the Flint Water Crisis”

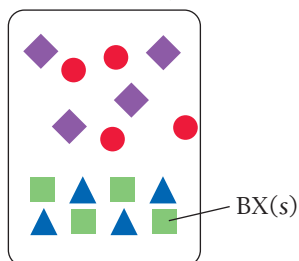
ANSWERS TO CONCEPTUAL CONNECTIONS

Cc 8.1 (b) The mass of a solution is equal to the mass of the solute plus the mass of the solvent. Although the solute seems to disappear, it really does not, and its mass becomes part of the mass of the solution, in accordance with the law of mass conservation.

Cc 8.2 (c) Because the volume has doubled, the concentration is halved, so the same volume should contain half as many solute molecules.

Cc 8.3 A is the limiting reactant. There are equal amounts of both reactants, but the reaction requires twice as much A as B.

Cc 8.4



Cc 8.5 (a) The charge of a polyatomic ion is the charge associated with the ion *as a whole*. The oxidation states of the individual atoms must sum to the charge of the ion, but they are assigned to *the individual atoms themselves*.

Option (b) is incorrect because oxidation state and charge *are not identical*, even though the charge of a *monoatomic* ion is equal to its oxidation state.

Option (c) is incorrect because charge is a physical property of ions. Conversely, the oxidation states of atoms are *not* real physical properties, but an imposed electron bookkeeping scheme.

Cc 8.6 (d) Since oxidation and reduction must occur together, an increase in the oxidation state of a reactant is always accompanied by a decrease in the oxidation state of a reactant.

Cc 8.7 (a) Sodium is the most easily oxidized because it is highest on the activity series.

9.1 Fire and Ice 367

9.2 The Nature of Energy: Key Definitions 368

9.3 The First Law of Thermodynamics: There Is No Free Lunch 370

9.4 Quantifying Heat and Work 373

9.5 Measuring ΔE for Chemical Reactions: Constant-Volume Calorimetry 379

9.6 Enthalpy: The Heat Evolved in a Chemical Reaction at Constant Pressure 381

9.7 Measuring ΔH for Chemical Reactions: Constant-Pressure Calorimetry 385

9.8 Relationships Involving ΔH_{rxn} 387

9.9 Determining Enthalpies of Reaction from Bond Energies 389

9.10 Determining Enthalpies of Reaction from Standard Enthalpies of Formation 392

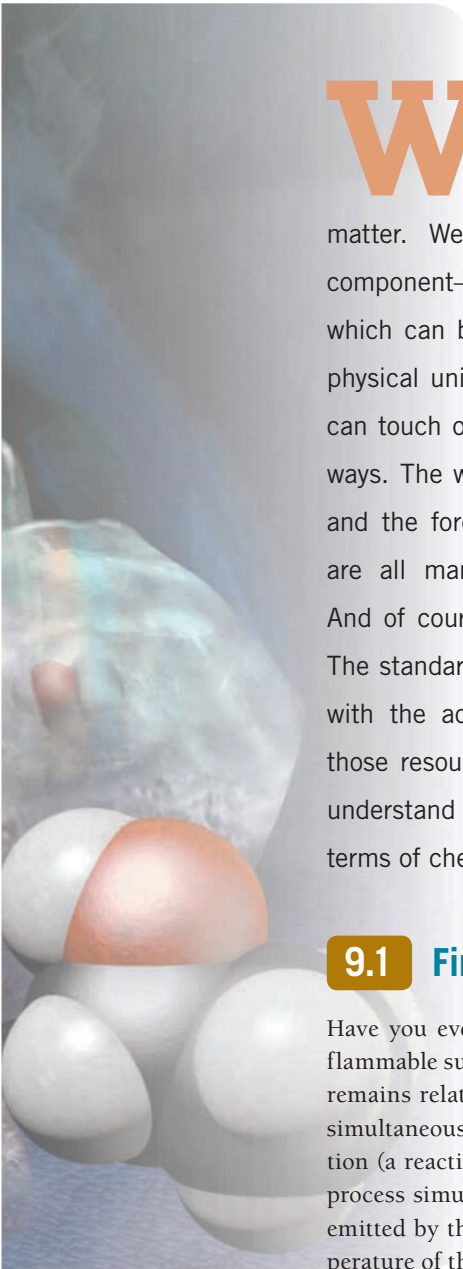
9.11 Lattice Energies for Ionic Compounds 398

Key Learning Outcomes 403



Ice cubes made of ethanol burn when ignited.

Thermochemistry



WE HAVE SPENT NEARLY ALL OF THE **FIRST HALF** of this book examining one of the two major components of our universe—matter. We now turn our attention to the other major component—energy. As far as we know, matter and energy—which can be interchanged but not destroyed—make up the physical universe. Unlike matter, energy is not something we can touch or hold in our hand, but we experience it in many ways. The warmth of sunlight, the feel of wind on our faces, and the force that presses us back when a car accelerates are all manifestations of energy and its interconversions. And of course energy is critical to society and to the world. The standard of living around the globe is strongly correlated with the access to and use of energy resources. Most of those resources, as we shall see, are chemical, and we can understand their advantages as well as their drawbacks in terms of chemistry.

9.1 Fire and Ice

Have you ever seen ice burn? Normal ice is frozen water, so it does not burn. But if ice is made of a flammable substance—such as ethanol, for example—it will burn upon ignition. The result is a flame that remains relatively cool because two processes—one that emits heat and one that absorbs heat—happen simultaneously. The first process is the combustion of the ethanol, which is an exothermic chemical reaction (a reaction that emits heat; see Section E.6). However, because the liquid ethanol is frozen, another process simultaneously occurs: the melting of the ice. The melting is endothermic and absorbs the heat emitted by the combustion of ethanol. As a result, the two processes cancel each other out and the temperature of the flaming ice is relatively cool and does not change much as the ice burns.

“There is a fact, or if you wish, a law, governing all natural phenomena that are known to date. There is no exception to this law—it is exact as far as we know. The law is called the conservation of energy. It states that there is a certain quantity, which we call energy, that does not change in the manifold changes which nature undergoes.”

—Richard P. Feynman (1918–1988)

The flaming ethanol ice illustrates many of the principles of **thermochemistry**, the study of the relationships between chemistry and energy. In this chapter, we examine how chemical reactions *exchange* energy with their surroundings and how we quantify the magnitude of those exchanges. These kinds of calculations are important, not only for flaming ice, but also for many other important processes, such as the production of energy, which drive the world economy.

9.2 The Nature of Energy: Key Definitions

Recall from our discussion of energy in Section E.6 that **energy** is the capacity to do work and **work** is the result of a force acting through a distance. You do work, for example, when you push a box across the floor. Another example of work is the collision between a rolling billiard ball and a stationary one as shown in the margin. The rolling ball has *energy* due to its motion. When it collides with another ball it does *work*, resulting in the *transfer* of energy from one ball to the other. The second billiard ball absorbs the energy and begins to roll across the table.

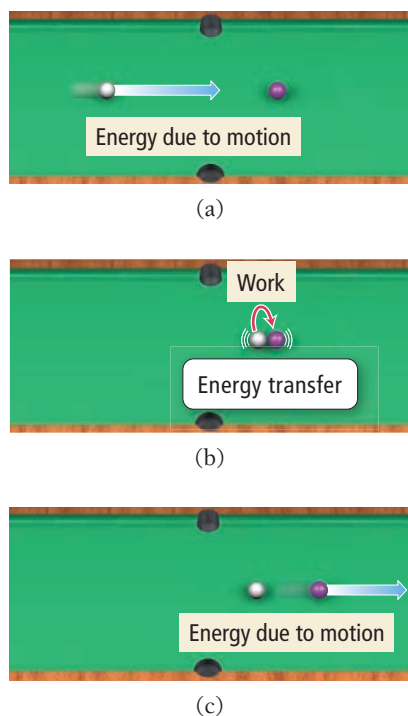
Energy can also be transferred through **heat** (q), the flow of energy caused by a temperature difference. For example, if you hold a cup of coffee in your hand, energy is transferred, in the form of heat, from the hot coffee to your cooler hand. Think of *energy* as something that an object or set of objects possesses. Think of *heat* and *work* as ways that objects or sets of objects *exchange* energy.

The energy contained in a rolling billiard ball is an example of **kinetic energy**, the energy associated with the *motion* of an object. The energy contained in a hot cup of coffee is **thermal energy**, the energy associated with the *temperature* of an object. Thermal energy is actually a type of kinetic energy because it arises from the motions of atoms or molecules within a substance.

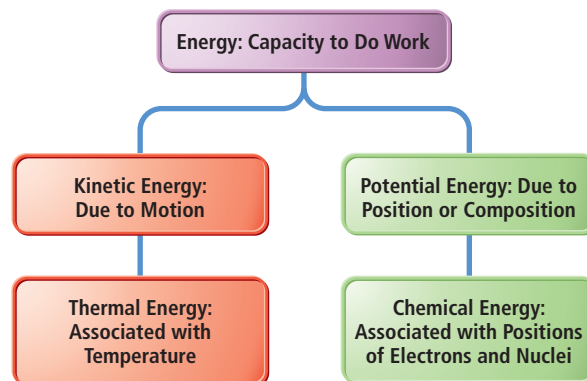
If you raise a billiard ball off the table, you increase its **potential energy**, the energy associated with the *position* or *composition* of an object. The potential energy of the billiard ball, for example, is a result of its position in Earth's gravitational field. Raising the ball off the table, against Earth's gravitational pull, gives it more potential energy. Another example of potential energy is the energy contained in a compressed spring. When you compress a spring, you push against the forces that tend to maintain the spring's uncompressed shape, storing energy as potential energy. **Chemical energy**, the energy associated with the relative positions of electrons and nuclei in atoms and molecules, is also a form of potential energy. Some chemical compounds, such as the methane in natural gas or the ethanol in the burning ice cube, also contain potential energy, and chemical reactions can release that potential energy. **Figure 9.1** summarizes these different kinds of energy.

As we discussed in Section E.6, the SI unit of energy is the $\text{kg} \cdot \text{m}^2/\text{s}^2$, defined as the joule (J). A second common unit of energy is the calorie (cal); $1 \text{ cal} = 4.184 \text{ J}$ (exact). A related energy unit is the nutritional, or uppercase "C" Calorie (Cal), equivalent to 1000 lowercase "c" calories. The Calorie is the same as a kilocalorie (kcal): $1 \text{ Cal} = 1 \text{ kcal} = 1000 \text{ cal}$.

Recall also from Section E.6 that the **law of conservation of energy** states that *energy can be neither created nor destroyed*. However, energy can be transferred from one object to another, and it can assume different forms. For example, if you drop a raised billiard ball, some of its potential energy



▲ (a) A rolling billiard ball has energy due to its motion. (b) When the ball collides with a second ball it does work, transferring energy to the second ball. (c) The second ball now has energy as it rolls away from the collision.



▲ **FIGURE 9.1** The Different Manifestations of Energy

Energy Transformation I

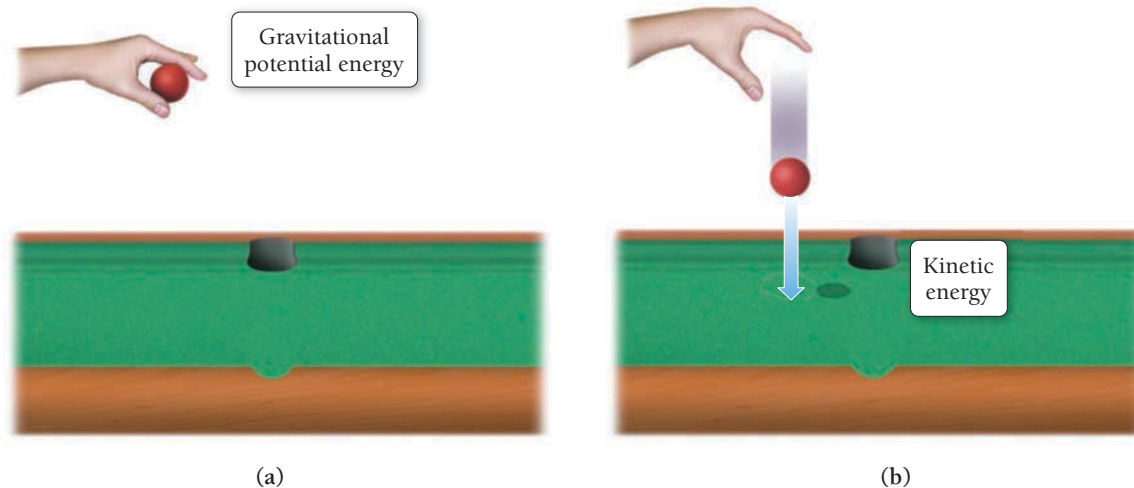


FIGURE 9.2 Energy Transformation: Potential and Kinetic Energy I (a) A billiard ball held above the billiard table has gravitational potential energy. (b) When the ball is released, the potential energy is transformed into kinetic energy, the energy of motion.

becomes kinetic energy as the ball falls toward the table, as shown in **Figure 9.2** ▲. If you release a compressed spring, the potential energy becomes kinetic energy as the spring expands outward, as shown in **Figure 9.3** ▼. When you burn natural gas in an oven, the chemical energy of the natural gas and oxygen becomes thermal energy that increases the temperature of the air in the oven.

A good way to understand and track energy changes that we also discussed in Section E.6 is to define the **system** under investigation. For example, the system may be the chemicals in a beaker in an experiment. The system's **surroundings** are everything with which the system can exchange energy. For the chemicals in a beaker, the surroundings may include the water that the chemicals are dissolved in (for aqueous solutions), the beaker itself, the lab bench on which the beaker sits, the air in the room, and so on. In an energy exchange, energy is transferred between the system and the surroundings, as shown in **Figure 9.4** ▼. If the system loses energy, the surroundings gain the same exact amount of energy, and vice versa.

When natural gas is burned, it combines with oxygen to form carbon dioxide and water, which have lower potential energy than the natural gas and the oxygen. The change in potential energy is the source of heat upon burning.

Energy Transformation II

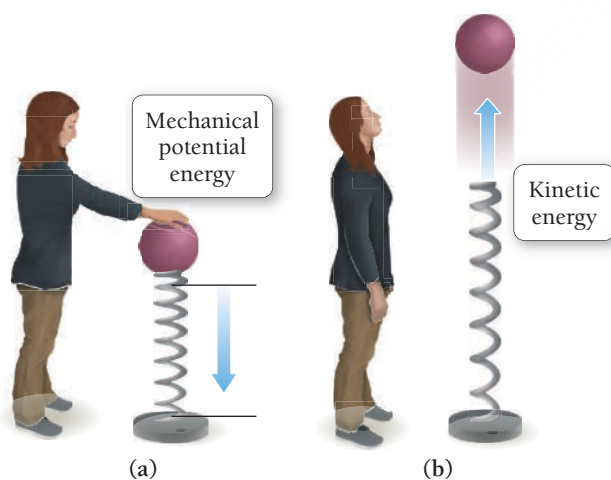


FIGURE 9.3 Energy Transformation: Potential and Kinetic Energy II (a) A compressed spring has potential energy. (b) When the spring is released, the potential energy is transformed into kinetic energy.

Energy Transfer

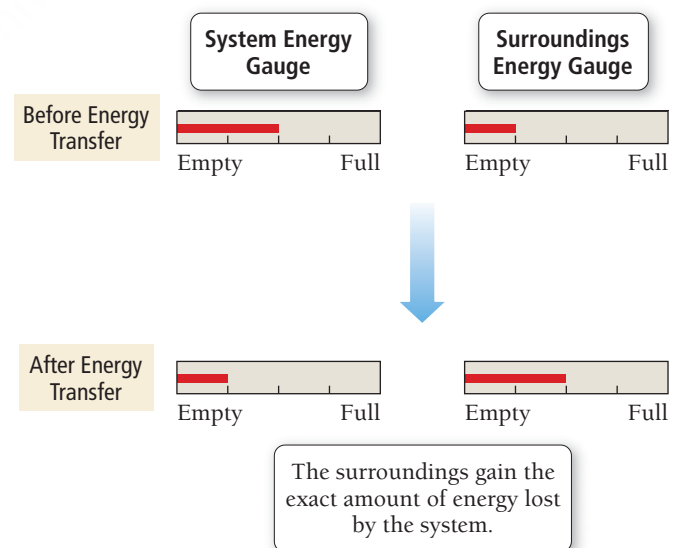


FIGURE 9.4 Energy Transfer If a system and surroundings had energy gauges (which would measure energy content in the way a fuel gauge measures fuel content), an energy transfer in which the system transfers energy to the surroundings would result in a decrease in the energy content of the system and an increase in the energy content of the surroundings. The total amount of energy, however, must be conserved.



KEY CONCEPT VIDEO
The First Law of Thermodynamics

Einstein showed that it is mass–energy that is conserved; one can be converted into the other. This equivalence becomes important in nuclear reactions, discussed in Chapter 20. In ordinary chemical reactions, however, the interconversion of mass and energy is not a significant factor, and we can regard mass and energy as independently conserved.

9.3 The First Law of Thermodynamics: There Is No Free Lunch

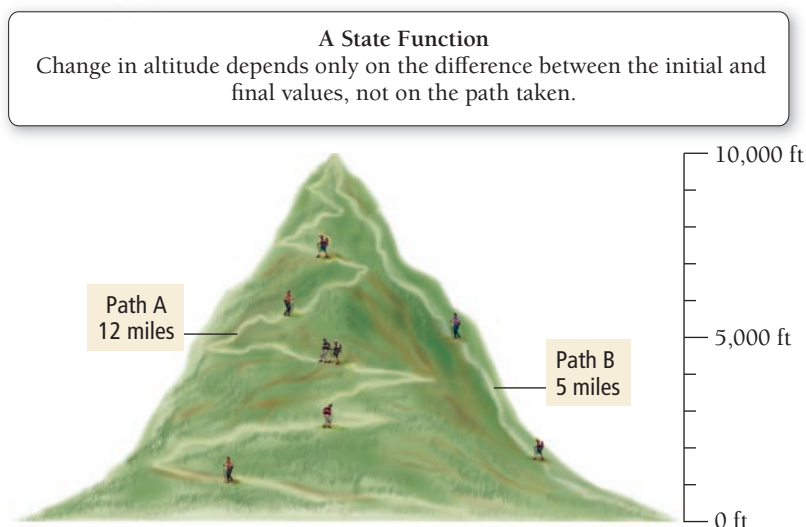
Thermodynamics is the general study of energy and its interconversions. The laws of thermodynamics are among the most fundamental in all of science, governing virtually every process that involves change. The **first law of thermodynamics** is the law of energy conservation, which we state as follows:

The total energy of the universe is constant.

In other words, because energy is neither created nor destroyed, and because the universe does not exchange energy with anything else, its energy content does not change. The first law has many implications: the most important one is that, with energy, we cannot get something for nothing. The best you can do with energy is break even—there is no free lunch. According to the first law, a device that would continually produce energy with no energy input, sometimes known as a *perpetual motion machine*, cannot exist. Occasionally, the media report or speculate on the discovery of a machine that can produce energy without the need for energy input. For example, you may have heard claims about an electric car that recharges itself while driving, or a new motor that can create additional usable electricity as well as the electricity to power itself. Although some hybrid (electric and gasoline-powered) vehicles can capture energy from braking and use that energy to recharge their batteries, they cannot run indefinitely without additional fuel. As for a motor that powers an external load as well as itself—no such thing exists. Our society has a continual need for energy, and as our present energy resources dwindle, new energy sources will be required. Those sources, whatever they may be, will follow the first law of thermodynamics—energy must be conserved.

The **internal energy (*E*)** of a system is *the sum of the kinetic and potential energies of all of the particles that compose the system*. Internal energy is a **state function**, which means that its value depends *only on the state of the system*, not on how the system arrived at that state. The state of a chemical system is specified by parameters such as temperature, pressure, concentration, and physical state (solid, liquid, or gas). Consider the mountain-climbing analogy depicted in **Figure 9.5** ▼. The elevation at any point during a mountain climb is analogous to a state function. For example, when we reach 10,000 ft, our elevation is 10,000 ft, no matter how we got there. The distance we traveled to get there, by contrast, is not a state function; we could have climbed the mountain by any number of routes, each requiring us to cover a different distance.

Because state functions depend only on the state of the system, the value of a *change* in a state function is always the difference between its final and initial values. If we start climbing a mountain at an elevation of 3000 ft and reach the summit at 10,000 ft, then our elevation change is 7000 ft (10,000 ft – 3000 ft), regardless of which path we took.



▲ **FIGURE 9.5** Altitude as a State Function

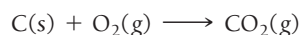
Like an altitude change, we determine an internal energy change (ΔE) by the difference in internal energy between the final and initial states:

$$\Delta E = E_{\text{final}} - E_{\text{initial}}$$

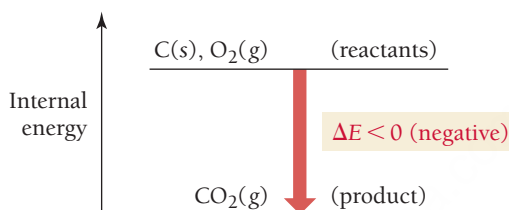
In a chemical system, the reactants constitute the initial state and the products constitute the final state. So ΔE is the difference in internal energy between the products and the reactants:

$$\Delta E = E_{\text{products}} - E_{\text{reactants}} \quad [9.1]$$

For example, consider the reaction between carbon and oxygen to form carbon dioxide:

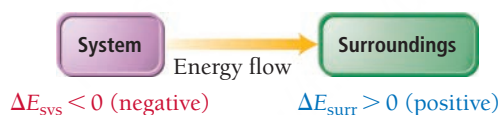


Just as we can portray the changes that occur when climbing a mountain with an *altitude* diagram, which depicts the *altitude* before and after the climb (see Figure 9.5), we can portray the energy changes that occur during a reaction with an *energy* diagram, which compares the *internal energy* of the reactants and the products:



The vertical axis of the diagram is *internal energy*, which increases as we move up on the diagram. For this reaction, the reactants are *higher* on the diagram than the products because they have higher internal energy. As the reaction occurs, the reactants become products, which have lower internal energy. Therefore, the reaction gives off energy, and ΔE (that is, $E_{\text{products}} - E_{\text{reactants}}$) is *negative*.

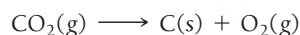
Where does the energy lost by the reactants (as they transform to products) go? If we define the thermodynamic *system* as the reactants and products of the reaction, then energy flows *out of the system* and *into the surroundings*:



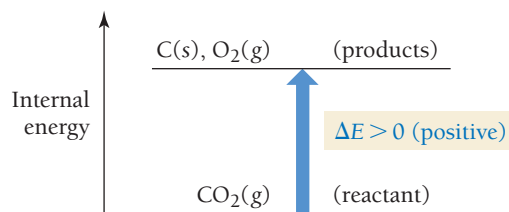
According to the first law, energy must be conserved. Therefore, the amount of energy lost by the system must exactly equal the amount gained by the surroundings:

$$\Delta E_{\text{sys}} = -\Delta E_{\text{surr}} \quad [9.2]$$


Now, suppose the reaction is reversed:



The energy-level diagram is nearly identical, with one important difference: $\text{CO}_2\text{(g)}$ is now the reactant, and C(s) and $\text{O}_2\text{(g)}$ are the products. Instead of decreasing in energy as the reaction occurs, the system increases in energy:



In this reversed reaction ΔE is *positive* and energy flows *into the system* and *out of the surroundings*:



Summarizing Energy Flow:

- If the reactants have a higher internal energy than the products, ΔE_{sys} is negative and energy flows out of the system into the surroundings.
- If the reactants have a lower internal energy than the products, ΔE_{sys} is positive and energy flows into the system from the surroundings.

We can think of the internal energy of the system in the same way we think about the balance in a checking account. Energy flowing *out of* the system is like a withdrawal and therefore carries a negative sign. Energy flowing *into* the system is like a deposit and carries a positive sign.




9.1 Cc

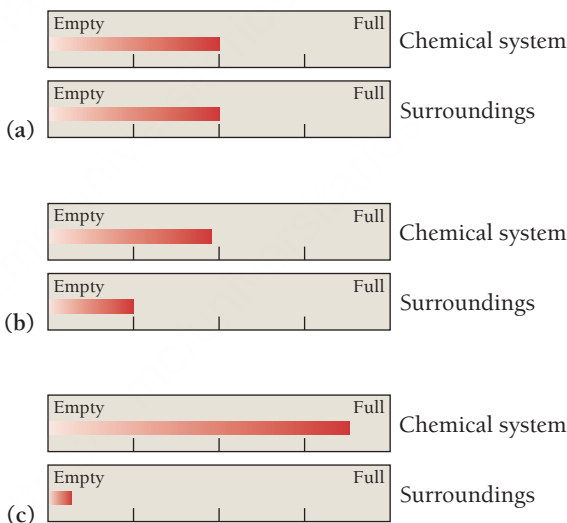
Conceptual Connection

System and Surroundings

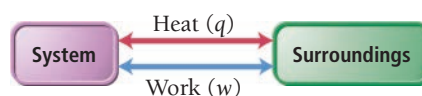
Consider these fictitious internal energy gauges for a chemical system and its surroundings.



Which diagram best represents the energy gauges for the same system and surroundings after an energy exchange in which ΔE_{sys} is negative?



As we saw earlier, a system can exchange energy with its surroundings through *heat* and *work*:



According to the first law of thermodynamics, the change in the internal energy of the system (ΔE) is the sum of the heat transferred (q) and the work done (w):

$$\Delta E = q + w \quad [9.3]$$

In the above equation, and from this point forward, we follow the standard convention that ΔE (with no subscript) refers to the internal energy change of the *system*. As Table 9.1 illustrates, energy entering the system through heat or work carries a positive sign, and energy leaving the system through heat or work carries a negative sign. Again, recall the checking account analogy. The system is like the checking account—withdrawals are negative and deposits are positive.

TABLE 9.1 Sign Conventions for q , w , and ΔE

q (heat)	+ system <i>gains</i> thermal energy	– system <i>loses</i> thermal energy
w (work)	+ work done <i>on</i> the system	– work done <i>by</i> the system
ΔE (change in internal energy)	+ energy flows <i>into</i> the system	– energy flows <i>out</i> of the system

Heat and Work

9.2
Cc
Conceptual Connection

PEARSON
eText
2.0

Identify each energy exchange as heat or work and determine whether the sign of heat or work (relative to the system) is positive or negative.

(a) An ice cube melts and cools the surrounding beverage. (The ice cube is the system.)

(b) A metal cylinder is rolled up a ramp. (The metal cylinder is the system.)

(c) Steam condenses on skin, causing a burn. (The condensing steam is the system.)

EXAMPLE 9.1

Internal Energy, Heat, and Work

The firing of a potato cannon provides a good example of the heat and work associated with a chemical reaction. In the potato cannon, a potato is stuffed into a long cylinder that is capped on one end and open at the other. Some kind of fuel is introduced under the potato at the capped end—usually through a small hole—and ignited. The potato shoots out of the cannon, sometimes flying hundreds of feet, and the cannon emits heat to the surroundings. If the burning of the fuel performs 855 J of work on the potato and produces 1422 J of heat, what is ΔE for the burning of the fuel? (*Note:* A potato cannon can be dangerous and should not be constructed without proper training and experience.)

SOLUTION

To solve the problem, substitute the values of q and w into the equation for ΔE . Because work is done by the system on the surroundings, w is negative. Similarly, because heat is released by the system to the surroundings, q is also negative.

$$\begin{aligned}\Delta E &= q + w \\ &= -1422 \text{ J} - 855 \text{ J} \\ &= -2277 \text{ J}\end{aligned}$$

FOR PRACTICE 9.1

A cylinder and piston assembly (defined as the system) is warmed by an external flame. The contents of the cylinder expand, doing work on the surroundings by pushing the piston outward against the external pressure. If the system absorbs 559 J of heat and does 488 J of work during the expansion, what is the value of ΔE ?

9.4 Quantifying Heat and Work

In the previous section, we calculated ΔE based on *given values of q (heat) and w (work)*. We now turn to *calculating q and w based on changes in temperature and volume*.

Heat

Recall from Section 9.2 that *heat* is the exchange of thermal energy between a system and its surroundings caused by a temperature difference. Notice the distinction we make between heat and temperature. Temperature is a *measure* of the thermal energy within a sample of matter. Heat is the *transfer* of thermal energy. Thermal energy always flows from hot to cold—from matter at higher temperatures to matter at lower temperatures. For example, a hot cup of coffee transfers thermal energy—as heat—to the lower temperature surroundings as it cools down.

PEARSON
eText
2.0

KEY CONCEPT VIDEO
Heat Capacity

The reason for this one-way transfer (from hot to cold) is related to the second law of thermodynamics, which we will discuss in Chapter 18.

TABLE 9.2 Specific Heat Capacities of Some Common Substances

Substance	Specific Heat Capacity, C_s (J/g · °C) *
Elements	
Lead	0.128
Gold	0.128
Silver	0.235
Copper	0.385
Iron	0.449
Aluminum	0.903
Compounds	
Ethanol	2.42
Water	4.18
Materials	
Glass (Pyrex)	0.75
Granite	0.79
Sand	0.84

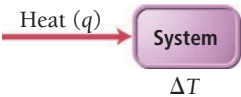
*At 298 K.



▲ The high heat capacity of the water surrounding San Francisco results in relatively cool summer temperatures.

Imagine a world where the cooler surroundings actually became colder as they transferred thermal energy to the hot coffee, which became hotter. Such a scenario is impossible because the spontaneous transfer of heat from hot to cold is a fundamental principle of our universe—no exception has ever been observed. The thermal energy in the molecules that compose the hot coffee distributes itself to the molecules in the surroundings. The heat transfer from the coffee to the surroundings stops when the two reach the same temperature, a condition called **thermal equilibrium**. At thermal equilibrium, there is no additional net transfer of heat.

Temperature Changes and Heat Capacity When a system absorbs heat (q), its temperature changes by ΔT , where $\Delta T = T_{\text{final}} - T_{\text{initial}}$.



Experiments show that the heat absorbed by a system and its corresponding temperature change are directly proportional: $q \propto \Delta T$. The constant of proportionality between q and ΔT is the system's *heat capacity* (C), a measure of how much heat a system must absorb to undergo a specified change in temperature:

$$q = C \times \Delta T$$

Heat capacity [9.4]

Notice that the higher the heat capacity of a system, the smaller the change in temperature for a given amount of absorbed heat. We define the **heat capacity** (C) of a system as the quantity of heat required to change its temperature by 1 °C. As we can see by solving Equation 9.4 for heat capacity, the units of heat capacity are those of heat (typically J) divided by those of temperature (typically °C):

$$C = \frac{q}{\Delta T} = \frac{\text{J}}{^\circ\text{C}}$$

In order to understand two important concepts related to heat capacity, consider a steel saucepan on a kitchen flame. The saucepan's temperature rises rapidly as it absorbs heat from the flame. However, if we add some water to the saucepan, the temperature rises more slowly. Why? The first reason is that, when we add the water, the same amount of heat must now warm more matter, so the temperature rises more slowly. In other words, heat capacity is an extensive property—it *depends on the amount of matter being heated* (see Section E.5). The second (and more fundamental) reason is that *water is more resistant to temperature change than steel*—water has an intrinsically higher capacity to absorb heat without undergoing a large temperature change. The measure of the *intrinsic capacity* of a substance to absorb heat is its **specific heat capacity** (C_s), the amount of heat required to raise the temperature of 1 gram of the substance by 1 °C. The units of specific heat capacity (also called *specific heat*) are J/g · °C. Table 9.2 lists the values of the specific heat capacity for several substances. Heat capacity is also sometimes reported as **molar heat capacity**, the amount of heat required to raise the temperature of 1 mol of a substance by 1 °C. The units of molar heat capacity are J/mol · °C. *Specific heat capacity* and *molar heat capacity* are intensive properties—they depend on the *kind* of substance being heated, not on the amount.

Notice that water has the highest specific heat capacity of all the substances in Table 9.2—changing the temperature of water requires a lot of heat. If you have ever experienced the drop in temperature that occurs when traveling from an inland region to the coast during the summer, you have experienced the effects of water's high specific heat capacity. On a summer's day in California, for example, the temperature difference between Sacramento (an inland city) and San Francisco (a coastal city) can be 18 °C (30 °F)—San Francisco enjoys a cool 20 °C (68 °F), while Sacramento bakes at nearly 38 °C (100 °F). Yet the intensity of sunlight falling on these two cities is the same. Why the large temperature difference? San Francisco sits on a peninsula, surrounded by the water of the Pacific Ocean. Water, with its high heat capacity, absorbs much of the sun's heat without undergoing a large increase in temperature, keeping San Francisco cool. Sacramento, by contrast, is about 160 km (100 mi) inland. The land surrounding Sacramento, with its low heat capacity, undergoes a large increase in temperature as it absorbs a similar amount of heat.

Similarly, only two U.S. states have never recorded a temperature above 100 °F. One of them is obvious: Alaska. It is too far north to get that hot. The other one, however, may come as a surprise. It is Hawaii. The high heat capacity of the water that surrounds the only island state moderates the temperature, preventing Hawaii from ever getting too hot.

We can use the specific heat capacity of a substance to quantify the relationship between the amount of heat added to a given amount of the substance and the corresponding temperature increase. The equation that relates these quantities is:

Heat (J) →

$q = m \times C_s \times \Delta T$

Temperature change (°C)

Mass (g)

Specific heat capacity J/g • °C

[9.5]

where q is the amount of heat in J, m is the mass of the substance in g, C_s is the specific heat capacity in J/g•°C, and ΔT is the temperature change in °C. Example 9.2 demonstrates the use of this equation.

ΔT in °C is equal to ΔT in K, but not equal to ΔT in °F (see Chapter E).

EXAMPLE 9.2

Temperature Changes and Heat Capacity

Interactive
Worked Example
Video 9.2

PEARSON
eText
2.0


You find a penny (minted before 1982, when pennies were made of nearly pure copper) in the snow. How much heat is absorbed by the penny as it warms from the temperature of the snow, which is -8.0°C , to the temperature of your body, 37.0°C ? Assume the penny is pure copper and has a mass of 3.10 g.

SORT You are given the mass of copper as well as its initial and final temperature. You are asked to find the heat required for the given temperature change.	GIVEN: $m = 3.10\text{ g copper}$ $T_i = -8.0^{\circ}\text{C}$ $T_f = 37.0^{\circ}\text{C}$ FIND: q
STRATEGIZE Equation 9.5, $q = m \times C_s \times \Delta T$, gives the relationship between the amount of heat (q) and the temperature change (ΔT).	CONCEPTUAL PLAN <div><div>$C_s, m, \Delta T$</div>→<div>q</div><div>$q = m \times C_s \times \Delta T$</div></div> RELATIONSHIPS USED $q = m \times C_s \times \Delta T$ (Equation 9.5) $C_s = 0.385\text{ J/g} \cdot ^{\circ}\text{C}$ (from Table 9.2)
SOLVE Gather the necessary quantities for the equation in the correct units and substitute these into the equation to calculate q .	SOLUTION $\Delta T = T_f - T_i = 37.0^{\circ}\text{C} - (-8.0^{\circ}\text{C}) = 45.0^{\circ}\text{C}$ $q = m \times C_s \times \Delta T$ $= 3.10\text{ g} \times 0.385\frac{\text{J}}{\text{g} \cdot ^{\circ}\text{C}} \times 45.0^{\circ}\text{C} = 53.7\text{ J}$

CHECK The units (J) are correct for heat. The sign of q is *positive*, as it should be because the penny *absorbed* heat from the surroundings.

FOR PRACTICE 9.2
To determine whether a shiny gold-colored rock is actually gold, a chemistry student decides to measure its heat capacity. She first weighs the rock and finds it has a mass of 4.7 g. She then finds that upon absorption of 57.2 J of heat, the temperature of the rock rises from 25°C to 57°C . Find the specific heat capacity of the substance composing the rock and determine whether the value is consistent with the rock being pure gold.

FOR MORE PRACTICE 9.2
A 55.0-g aluminum block initially at 27.5°C absorbs 725 J of heat. What is the final temperature of the aluminum?



9.3

Cc

Conceptual
Connection

The Heat Capacity of Water

Suppose you are cold-weather camping and decide to heat some objects to bring into your sleeping bag for added warmth. You place a large water jug and a rock of equal mass near the fire. Over time, both the rock and the water jug warm to about 38°C (100°F). You can bring only one into your sleeping bag. Which one should you choose to keep you warmer? Why?

Thermal Energy Transfer As we noted earlier, when two substances of different temperature are combined, thermal energy flows as heat from the hotter substance to the cooler one. If we assume that the two substances are thermally isolated from everything else, then the heat lost by one substance exactly equals the heat gained by the other (according to the law of energy conservation). If we define one substance as the system and the other as the surroundings, we can quantify the heat exchange as:


$$q_{\text{sys}} = -q_{\text{surr}}$$

Suppose a block of metal initially at 55°C is submerged into water initially at 25°C. Thermal energy transfers as heat from the metal to the water. The metal becomes colder and the water becomes warmer until the two substances reach the same temperature (thermal equilibrium). The exact temperature change that occurs depends on the masses of the metal and the water and on their specific heat capacities. Because $q = m \times C_s \times \Delta T$, we can arrive at the following relationship:

$$q_{\text{metal}} = -q_{\text{water}}$$

$$m_{\text{metal}} \times C_{s, \text{metal}} \times \Delta T_{\text{metal}} = -m_{\text{water}} \times C_{s, \text{water}} \times \Delta T_{\text{water}}$$

Example 9.3 demonstrates how to work with thermal energy transfer.



EXAMPLE 9.3

Thermal Energy Transfer

Interactive
Worked Example
Video 9.3



A 32.5-g cube of aluminum initially at 45.8°C is submerged into 105.3 g of water at 15.4°C. What is the final temperature of both substances at thermal equilibrium? (Assume that the aluminum and the water are thermally isolated from everything else.)

SORT You are given the masses of aluminum and water and their initial temperatures. You are asked to find the final temperature.

GIVEN: $m_{\text{Al}} = 32.5 \text{ g}$ $m_{\text{H}_2\text{O}} = 105.3 \text{ g}$
 $T_{i, \text{Al}} = 45.8^\circ\text{C}$; $T_{i, \text{H}_2\text{O}} = 15.4^\circ\text{C}$

FIND: T_f

STRATEGIZE The heat lost by the aluminum (q_{Al}) equals the heat gained by the water ($q_{\text{H}_2\text{O}}$).

Use the relationship between q and ΔT and the given variables to find a relationship between ΔT_{Al} and $\Delta T_{\text{H}_2\text{O}}$.

Use the relationship between ΔT_{Al} and $\Delta T_{\text{H}_2\text{O}}$ (that you just found) along with the initial temperatures of the aluminum and the water to determine the final temperature. Note that at thermal equilibrium, the final temperature of the aluminum and the water is the same, that is, $T_{f, \text{Al}} = T_{f, \text{H}_2\text{O}} = T_f$.

CONCEPTUAL PLAN

$$q_{\text{Al}} = -q_{\text{H}_2\text{O}}$$

$$m_{\text{Al}}, C_{s, \text{Al}}, m_{\text{H}_2\text{O}}, C_{s, \text{H}_2\text{O}} \rightarrow \Delta T_{\text{Al}} = \text{constant} \times \Delta T_{\text{H}_2\text{O}}$$

$$m_{\text{Al}} \times C_{s, \text{Al}} \times \Delta T_{\text{Al}} = -m_{\text{H}_2\text{O}} \times C_{s, \text{H}_2\text{O}} \times \Delta T_{\text{H}_2\text{O}}$$

$$T_{i, \text{Al}}, T_{i, \text{H}_2\text{O}} \rightarrow T_f$$

$$\Delta T_{\text{Al}} = \text{constant} \times \Delta T_{\text{H}_2\text{O}}$$

RELATIONSHIPS USED

$$C_{s, \text{H}_2\text{O}} = 4.18 \text{ J/g} \cdot ^\circ\text{C}; C_{s, \text{Al}} = 0.903 \text{ J/g} \cdot ^\circ\text{C} \text{ (Table 9.2)}$$

$$q = m \times C_s \times \Delta T \text{ (Equation 9.5)}$$

SOLVE Write the equation for the relationship between the heat lost by the aluminum (q_{Al}) and the heat gained by the water ($q_{\text{H}_2\text{O}}$) and substitute $q = m \times C_s \times \Delta T$ for each substance.

Substitute the values of m (given) and C_s (from Table 9.2) for each substance and solve the equation for ΔT_{Al} . (Alternatively, you can solve the equation for $\Delta T_{\text{H}_2\text{O}}$.)

Substitute the initial temperatures of aluminum and water into the relationship from the previous step and solve the expression for the final temperature (T_f). Remember that the final temperature for both substances is the same.

SOLUTION

$$\begin{aligned} q_{\text{Al}} &= -q_{\text{H}_2\text{O}} \\ m_{\text{Al}} \times C_{s, \text{Al}} \times \Delta T_{\text{Al}} &= -m_{\text{H}_2\text{O}} \times C_{s, \text{H}_2\text{O}} \times \Delta T_{\text{H}_2\text{O}} \\ 32.5 \text{ g} \times \frac{0.903 \text{ J}}{\text{g} \cdot ^\circ\text{C}} \cdot \Delta T_{\text{Al}} &= -105.3 \text{ g} \times \frac{4.18 \text{ J}}{\text{g} \cdot ^\circ\text{C}} \cdot \Delta T_{\text{H}_2\text{O}} \\ 29.348 \cdot \Delta T_{\text{Al}} &= -440.15 \cdot \Delta T_{\text{H}_2\text{O}} \\ \Delta T_{\text{Al}} &= -14.998 \cdot \Delta T_{\text{H}_2\text{O}} \\ T_f - T_{i, \text{Al}} &= -14.998(T_f - T_{i, \text{H}_2\text{O}}) \\ T_f &= -14.998 \cdot T_f + 14.998 \cdot T_{i, \text{H}_2\text{O}} + T_{i, \text{Al}} \\ T_f + 14.998 \cdot T_f &= 14.998 \cdot T_{i, \text{H}_2\text{O}} + T_{i, \text{Al}} \\ 15.998 \cdot T_f &= 14.998 \cdot T_{i, \text{H}_2\text{O}} + T_{i, \text{Al}} \\ T_f &= \frac{14.998 \cdot T_{i, \text{H}_2\text{O}} + T_{i, \text{Al}}}{15.998} = \frac{14.998 \cdot 15.4^\circ\text{C} + 45.8^\circ\text{C}}{15.998} \\ &= 17.3^\circ\text{C} \end{aligned}$$

CHECK The units $^\circ\text{C}$ are correct. The final temperature of the mixture is closer to the initial temperature of the water than the aluminum. This makes sense for two reasons: (1) Water has a higher specific heat capacity than aluminum; and (2) there is more water than aluminum. Because the aluminum loses the same amount of heat that the water gains, the greater mass and specific heat capacity of the water make the temperature change in the water *less than* the temperature change in the aluminum.

FOR PRACTICE 9.3

A block of copper of unknown mass has an initial temperature of 65.4°C . The copper is immersed in a beaker containing 95.7 g of water at 22.7°C . When the two substances reach thermal equilibrium, the final temperature is 24.2°C . What is the mass of the copper block?

Thermal Energy Transfer


Substances A and B, initially at different temperatures, come in contact with each other and reach thermal equilibrium. The mass of substance A is twice the mass of substance B. The specific heat capacity of substance B is twice the specific heat capacity of substance A. Which statement is true about the final temperature of the two substances once thermal equilibrium is reached?

- The final temperature is closer to the initial temperature of substance A than substance B.
- The final temperature is closer to the initial temperature of substance B than substance A.
- The final temperature is exactly midway between the initial temperatures of substances A and B.

9.4



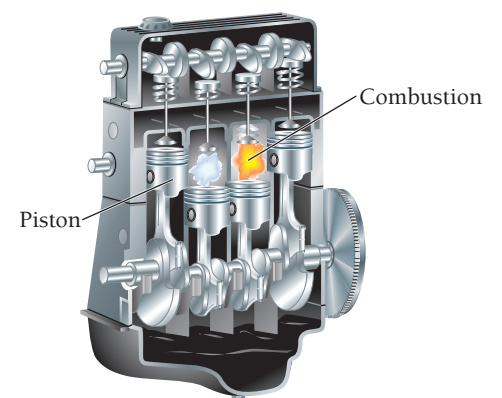
Conceptual
Connection

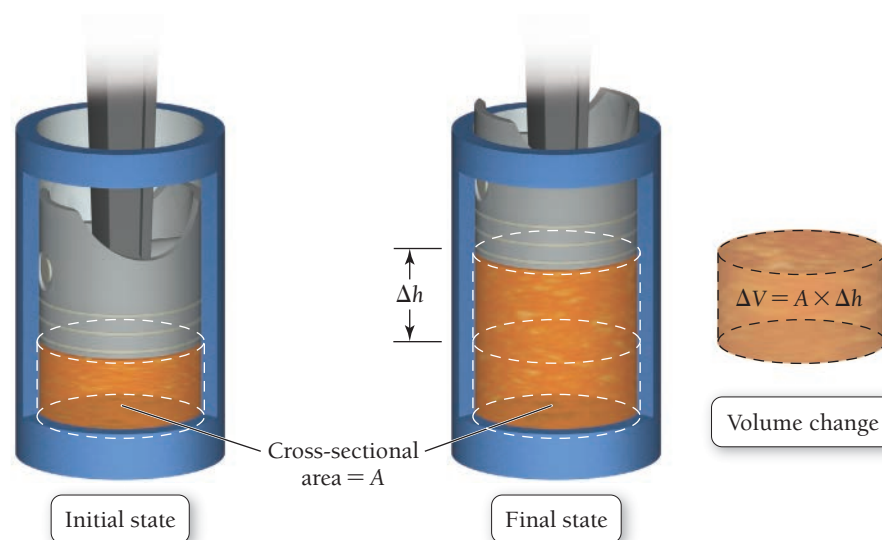


Work: Pressure–Volume Work

Recall that energy transfer between a system and its surroundings can occur via heat (q) or work (w). We just discussed how to calculate the *heat* associated with an observed *temperature* change. We now turn to calculating the *work* associated with an observed *volume* change. Although a chemical reaction can do several different types of work, for now we limit our discussion to **pressure–volume work**. Pressure–volume work occurs, for example, in the cylinder of an automobile engine. The combustion of gasoline causes gases within the cylinders to expand, pushing the piston outward (against an external pressure) and ultimately moving the wheels of the car. See Section 10.2 for a detailed description of pressure.

► The combustion of gasoline within an engine's cylinders does pressure–volume work that results in the motion of the car.





▲ **FIGURE 9.6** Piston Moving within a Cylinder against an External Pressure

We can derive an equation for the value of pressure–volume work from the definition of work as a force (F) acting through a distance (D):

$$w = F \times D \quad [9.6]$$

When the volume of a cylinder increases (**Figure 9.6** ▲), it pushes against an external force. That external force is pressure (P), which is defined as force (F) divided by area (A):

$$P = \frac{F}{A} \quad \text{or} \quad F = P \times A$$

If we substitute this expression for force into the definition of work given in Equation 9.6, we arrive at:

$$\begin{aligned} w &= F \times D \\ &= P \times A \times D \end{aligned}$$

The distance through which the force acts is the change in the height of the piston as it moves during the expansion (Δh). Substituting Δh for D , we get:

$$w = P \times A \times \Delta h$$

Because the volume of a cylinder is the area of its base times its height, $A \times \Delta h$ is actually the change in volume (ΔV) that occurs during the expansion (see Figure 9.6). Thus, the expression for work becomes:

$$w = P\Delta V$$

Still missing from the equation is the *sign* of the work done by the expanding gases. As the volume of the cylinder increases, work is done *on* the surroundings *by* the system, so w should be negative. However, upon expansion, V_2 (the final volume) is greater than V_1 (the initial volume) so ΔV is positive. In order for w to be negative for a positive expansion, we need to add a negative sign to our equation. In other words, w and ΔV must be opposite in sign:

$$w = -P\Delta V \quad [9.7]$$

So the work caused by an expansion of volume is the negative of the pressure that the volume expands against multiplied by the change in volume that occurs during the expansion. The units of the work we obtain by using this equation depend on the units of pressure and volume. Most commonly, the units of pressure are atmospheres (atm) (see Section 10.2) and those of volume are liters (L), so the resulting units are $\text{L} \cdot \text{atm}$. To convert between $\text{L} \cdot \text{atm}$ and J, we use the conversion factor $101.3 \text{ J} = 1 \text{ L} \cdot \text{atm}$.

The force in this equation must be a constant force.

EXAMPLE 9.4**Pressure–Volume Work**

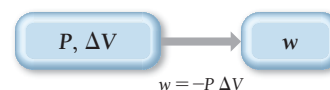
To inflate a balloon you must do pressure–volume work on the surroundings. If you inflate a balloon from a volume of 0.100 L to 1.85 L against an external pressure of 1.00 atm, how much work is done (in joules)?

SORT You know the initial and final volumes of the balloon and the pressure against which it expands. The balloon and its contents are the system.

GIVEN: $V_1 = 0.100 \text{ L}$, $V_2 = 1.85 \text{ L}$, $P = 1.00 \text{ atm}$

FIND: w

STRATEGIZE The equation $w = -P\Delta V$ specifies the amount of work done during a volume change against an external pressure.

CONCEPTUAL PLAN

SOLVE To solve the problem, calculate the value of ΔV and substitute that value, together with P , into Equation 9.7.

SOLUTION

$$\begin{aligned}\Delta V &= V_2 - V_1 \\ &= 1.85 \text{ L} - 0.100 \text{ L} \\ &= 1.75 \text{ L} \\ w &= -P\Delta V \\ &= -1.00 \text{ atm} \times 1.75 \text{ L} \\ &= -1.75 \text{ L} \cdot \text{atm}\end{aligned}$$

Convert the units of the answer ($\text{L} \cdot \text{atm}$) to joules using $101.3 \text{ J} = 1 \text{ L} \cdot \text{atm}$.

$$-1.75 \cancel{\text{L} \cdot \text{atm}} \times \frac{101.3 \text{ J}}{1 \cancel{\text{L} \cdot \text{atm}}} = -177 \text{ J}$$

CHECK The units (J) are correct for work. The sign of the work is negative, as it should be for an expansion: Work is done on the surroundings by the expanding balloon.

FOR PRACTICE 9.4

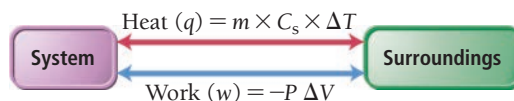
A cylinder equipped with a piston expands against an external pressure of 1.58 atm. If the initial volume is 0.485 L and the final volume is 1.245 L, how much work (in J) is done?

FOR MORE PRACTICE 9.4

When fuel is burned in a cylinder equipped with a piston, the volume expands from 0.255 L to 1.45 L against an external pressure of 1.02 atm. In addition, 875 J is emitted as heat. What is ΔE for the burning of the fuel?

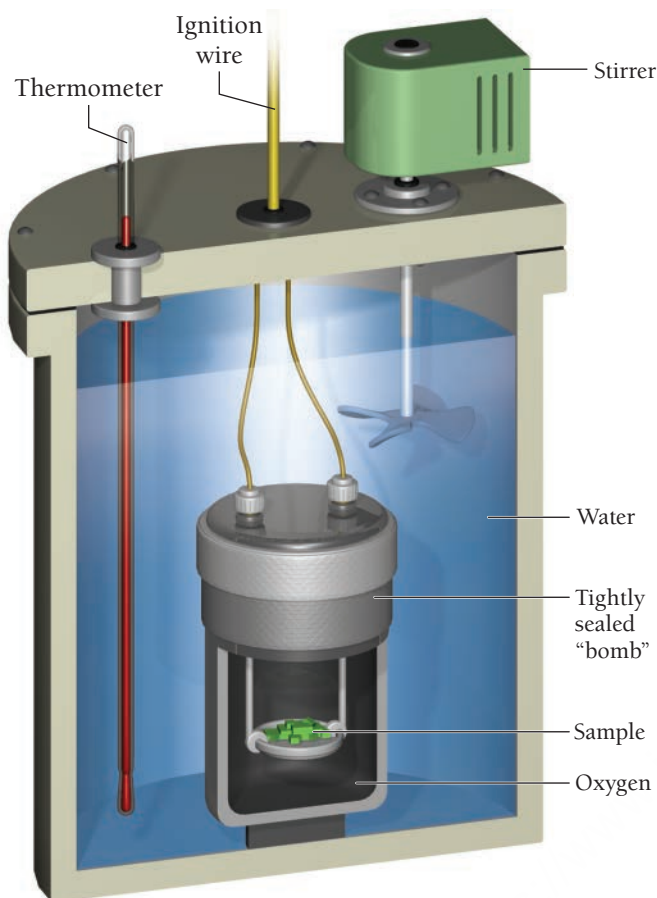
9.5 Measuring ΔE for Chemical Reactions: Constant-Volume Calorimetry

We now have a complete picture of how a system exchanges energy with its surroundings via heat and pressure–volume work:



Recall from Section 9.3 that the change in internal energy that occurs during a chemical reaction (ΔE) is a measure of *all of the energy* (heat and work) exchanged with the surroundings ($\Delta E = q + w$). Therefore, we can measure the changes in temperature (to calculate heat) and the changes in volume (to calculate work) that occur during a chemical reaction, and sum them together to calculate ΔE . However, an easier way to obtain the value of ΔE for a chemical reaction is to force all of the energy change associated with a reaction to manifest itself as heat rather than work. We can then measure the temperature change caused by the heat flow.

The Bomb Calorimeter



▲ FIGURE 9.7 The Bomb Calorimeter A bomb calorimeter measures changes in internal energy for combustion reactions.

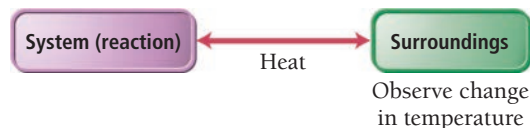
The heat capacity of the calorimeter, C_{cal} , has units of energy over temperature; its value accounts for all of the heat absorbed by all of the components within the calorimeter (including the water).

Recall that $\Delta E = q + w$ and that $w = -P\Delta V$. If a reaction is carried out at constant volume, then $\Delta V = 0$ and $w = 0$. The heat evolved (given off), called the *heat at constant volume* (q_v), is then equal to ΔE_{rxn} .

$$\Delta E_{\text{rxn}} = q_v + w \quad \begin{array}{l} \text{Equals zero} \\ \text{at constant volume} \end{array} \quad [9.8]$$

$$\Delta E_{\text{rxn}} = q_v$$

We measure the heat evolved in a chemical reaction using *calorimetry*. In **calorimetry**, we measure the thermal energy the reaction (defined as the system) and the surroundings exchange by observing the change in temperature of the surroundings.



The magnitude of the temperature change in the surroundings depends on the magnitude of ΔE for the reaction and on the heat capacity of the surroundings.

Figure 9.7 shows a **bomb calorimeter**, a piece of equipment designed to measure ΔE for combustion reactions. In a bomb calorimeter, the reaction occurs in a sealed container called a *bomb*. This ensures that the reaction occurs at constant volume. To use a bomb calorimeter, we put the sample to be burned (of known mass) into a cup equipped with an ignition wire. We then seal the cup into the bomb, which is filled with oxygen gas, and place the bomb in a water-filled, insulated container. The container is equipped with a stirrer and a thermometer. Finally, we ignite the sample with a wire coil, and monitor the temperature with the thermometer. The temperature change (ΔT) is related to the heat absorbed by the entire calorimeter assembly (q_{cal}) by the equation:

$$q_{\text{cal}} = C_{\text{cal}} \times \Delta T \quad [9.9]$$

where C_{cal} is the heat capacity of the entire calorimeter assembly (which is usually determined in a separate measurement involving the burning of a substance that gives off a known amount of heat). If no heat escapes from the calorimeter, the amount of heat *gained* by the calorimeter exactly equals that *released* by the reaction (the two are equal in magnitude but opposite in sign):

$$q_{\text{cal}} = -q_{\text{rxn}} \quad [9.10]$$

Because the reaction occurs under conditions of constant volume, $q_{\text{rxn}} = q_v = \Delta E_{\text{rxn}}$. This measured quantity is the change in the internal energy of the reaction for the specific amount of reactant burned. To determine ΔE_{rxn} per mole of a particular reactant—a more general quantity—we divide by the number of moles that actually react, as demonstrated in Example 9.5.

EXAMPLE 9.5

Measuring ΔE_{rxn} in a Bomb Calorimeter

When 1.010 g of sucrose ($\text{C}_{12}\text{H}_{22}\text{O}_{11}$) undergoes combustion in a bomb calorimeter, the temperature rises from 24.92°C to 28.33°C . Find ΔE_{rxn} for the combustion of sucrose in kJ/mol sucrose. The heat capacity of the bomb calorimeter, determined in a separate experiment, is $4.90 \text{ kJ}/^\circ\text{C}$. (You can ignore the heat capacity of the small sample of sucrose because it is negligible compared to the heat capacity of the calorimeter.)

SORT You are given the mass of sucrose, the heat capacity of the calorimeter, and the initial and final temperatures. You are asked to find the change in internal energy for the reaction.

GIVEN: 1.010 g $\text{C}_{12}\text{H}_{22}\text{O}_{11}$, $T_i = 24.92^\circ\text{C}$,
 $T_f = 28.33^\circ\text{C}$, $C_{\text{cal}} = 4.90 \text{ kJ}/^\circ\text{C}$
FIND: ΔE_{rxn}

Interactive
Worked Example
Video 9.5

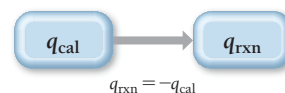
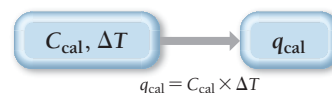
PEARSON
eText
2.0

STRATEGIZE The conceptual plan has three parts. In the first part, use the temperature change and the heat capacity of the calorimeter to find q_{cal} .

In the second part, use q_{cal} to determine q_{rxn} (which just involves changing the sign). Because the bomb calorimeter ensures constant volume, q_{rxn} is equivalent to ΔE_{rxn} for the amount of sucrose burned.

In the third part, divide q_{rxn} by the number of moles of sucrose to find ΔE_{rxn} per mole of sucrose.

CONCEPTUAL PLAN



$$\Delta E_{\text{rxn}} = \frac{q_{\text{rxn}}}{\text{mol C}_{12}\text{H}_{22}\text{O}_{11}}$$

RELATIONSHIPS USED

$$q_{\text{cal}} = C_{\text{cal}} \times \Delta T = -q_{\text{rxn}}$$

$$\text{molar mass C}_{12}\text{H}_{22}\text{O}_{11} = 342.3 \text{ g/mol}$$

SOLVE Gather the necessary quantities in the correct units and substitute these into the equation to calculate q_{cal} .

Find q_{rxn} by taking the negative of q_{cal} .

Find ΔE_{rxn} per mole of sucrose by dividing q_{rxn} by the number of moles of sucrose (calculated from the given mass of sucrose and its molar mass).

SOLUTION

$$\Delta T = T_{\text{f}} - T_{\text{i}}$$

$$= 28.33^{\circ}\text{C} - 24.92^{\circ}\text{C} = 3.41^{\circ}\text{C}$$

$$q_{\text{cal}} = C_{\text{cal}} \times \Delta T$$

$$q_{\text{cal}} = 4.90 \frac{\text{kJ}}{^{\circ}\text{C}} \times 3.41^{\circ}\text{C} = 16.7 \text{ kJ}$$

$$q_{\text{rxn}} = -q_{\text{cal}} = -16.7 \text{ kJ}$$

$$\Delta E_{\text{rxn}} = \frac{q_{\text{rxn}}}{\text{mol C}_{12}\text{H}_{22}\text{O}_{11}}$$

$$= \frac{-16.7 \text{ kJ}}{1.010 \text{ g C}_{12}\text{H}_{22}\text{O}_{11} \times \frac{1 \text{ mol C}_{12}\text{H}_{22}\text{O}_{11}}{342.3 \text{ g C}_{12}\text{H}_{22}\text{O}_{11}}}$$

$$= -5.66 \times 10^3 \text{ kJ/mol C}_{12}\text{H}_{22}\text{O}_{11}$$

CHECK The units of the answer (kJ) are correct for a change in internal energy. The sign of ΔE_{rxn} is negative, as it should be for a combustion reaction that gives off energy.

FOR PRACTICE 9.5

When 1.550 g of liquid hexane (C_6H_{14}) undergoes combustion in a bomb calorimeter, the temperature rises from 25.87°C to 38.13°C . Find ΔE_{rxn} for the reaction in kJ/mol hexane. The heat capacity of the bomb calorimeter, determined in a separate experiment, is $5.73 \text{ kJ}/^{\circ}\text{C}$.

FOR MORE PRACTICE 9.5

The combustion of toluene has a ΔE_{rxn} of $-3.91 \times 10^3 \text{ kJ/mol}$. When 1.55 g of toluene (C_7H_8) undergoes combustion in a bomb calorimeter, the temperature rises from 23.12°C to 37.57°C . Find the heat capacity of the bomb calorimeter.

9.6 Enthalpy: The Heat Evolved in a Chemical Reaction at Constant Pressure



KEY CONCEPT VIDEO
The Change in Enthalpy for a Chemical Reaction

In Section 9.5, we saw that when a chemical reaction occurs in a sealed container under conditions of constant volume, the energy evolves only as heat. However, when a chemical reaction occurs open to the atmosphere under conditions of constant pressure—for example, a reaction occurring in an open beaker or the burning of natural gas on a stove—the energy can evolve as both heat and work. As we have also seen, ΔE_{rxn} is a measure of the *total energy change* (both heat and work) that occurs during a reaction. However, in many cases, we are interested only in the heat exchanged, not the work done. For example, when we burn natural gas on a stove to cook food, we do not really care how much work the combustion reaction does on the atmosphere by expanding against it—we just want to know how much heat is given off to cook the food. Under conditions of constant pressure, a thermodynamic quantity called *enthalpy* represents exactly this.

We define the **enthalpy** (H) of a system as the sum of its internal energy and the product of its pressure and volume:

$$H = E + PV \quad [9.11]$$

Because internal energy, pressure, and volume are all state functions, enthalpy is also a state function. The *change in enthalpy* (ΔH) for any process occurring under constant pressure is given by the expression:

$$\Delta H = \Delta E + P\Delta V \quad [9.12]$$

To better understand this expression, we can interpret the two terms on the right with the help of relationships already familiar to us. We saw previously that $\Delta E = q + w$. If we represent the heat at constant pressure as q_p , then the change in internal energy at constant pressure is $\Delta E = q_p + w$. In addition, from our definition of pressure–volume work, we know that $P\Delta V = -w$. Substituting these expressions into the expression for ΔH gives us:

$$\begin{aligned} \Delta H &= \Delta E + P\Delta V \\ &= (q_p + w) + P\Delta V \\ &= q_p + w - w \\ \Delta H &= q_p \end{aligned} \quad [9.13]$$

We can see that ΔH is equal to q_p , the heat at constant pressure.

Conceptually (and often numerically), ΔH and ΔE are similar: They both represent changes in a state function for the system. However, ΔE is a measure of *all of the energy* (heat and work) exchanged with the surroundings, while ΔH is a measure of only the heat exchanged under conditions of constant pressure. For chemical reactions that do not exchange much work with the surroundings—that is, those that do not cause a large change in reaction volume as they occur— ΔH and ΔE are nearly identical in value. For chemical reactions that produce or consume large amounts of gas, and therefore result in large volume changes, ΔH and ΔE will be slightly different in value.



9.5 Cc

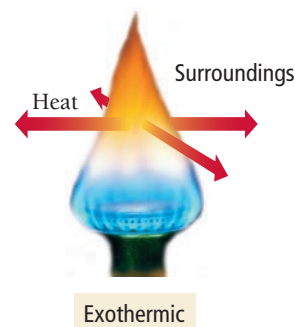
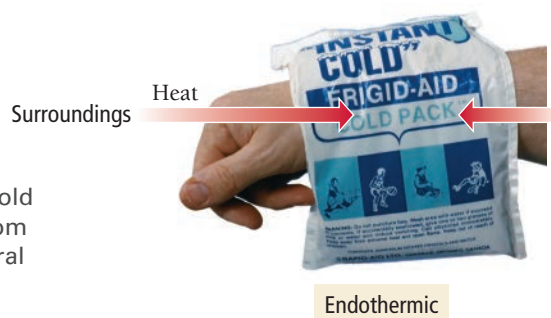
Conceptual
Connection

The Difference between ΔH and ΔE

Lighters are usually fueled by butane (C_4H_{10}). When 1 mol of butane burns at constant pressure, it produces 2658 kJ of heat and does 3 kJ of work. What are the values of ΔH and ΔE for the combustion of 1 mol of butane?

The signs of ΔH and ΔE follow the same conventions. A positive ΔH indicates that heat flows into the system as the reaction occurs. A chemical reaction with a positive ΔH , called an **endothermic reaction**, absorbs heat from its surroundings. (We first discussed endothermic processes in Section E.6.) A chemical cold pack used to ice athletic injuries is a good example of an endothermic reaction. When a barrier separating the reactants in a chemical cold pack is broken, the substances mix, react, and absorb heat from the surroundings. The surroundings—including, say, your bruised wrist—become *colder* because they *lose* energy as the cold pack absorbs it.

A chemical reaction with a negative ΔH , called an **exothermic reaction**, gives off heat to its surroundings. The reaction that occurs when ethanol burns (discussed in Section 9.1) is a good example of an exothermic reaction. As the reaction occurs, heat is given off into the surroundings making them warmer. The burning of natural gas is another example of an exothermic reaction. As the gas burns, it gives off energy, raising the temperature of its surroundings.



► The reaction that occurs in a chemical cold pack is endothermic—it absorbs energy from the surroundings. The combustion of natural gas is an exothermic reaction—it releases energy to the surroundings.

Summarizing Enthalpy:

- The value of ΔH for a chemical reaction is the amount of heat absorbed or evolved in the reaction under conditions of constant pressure.
- An endothermic reaction has a *positive* ΔH and absorbs heat from the surroundings. An endothermic reaction feels cold to the touch (if it is occurring near room temperature).
- An exothermic reaction has a *negative* ΔH and gives off heat to the surroundings. An exothermic reaction feels warm to the touch (if it is occurring near room temperature).

EXAMPLE 9.6**Exothermic and Endothermic Processes**

Identify each process as endothermic or exothermic and indicate the sign of ΔH .

- (a) sweat evaporating from skin
- (b) water freezing in a freezer
- (c) wood burning in a fire

SOLUTION

- (a) Sweat evaporating from skin cools the skin and is therefore endothermic, with a positive ΔH : The skin must supply heat to the perspiration in order for it to continue to evaporate.
- (b) Water freezing in a freezer releases heat and is therefore exothermic, with a negative ΔH : The refrigeration system in the freezer must remove this heat for the water to continue to freeze.
- (c) Wood burning in a fire releases heat and is therefore exothermic, with a negative ΔH .

FOR PRACTICE 9.6

Identify each process as endothermic or exothermic and indicate the sign of ΔH .

- (a) an ice cube melting
- (b) nail polish remover quickly evaporating after it is accidentally spilled on the skin
- (c) gasoline burning within the cylinder of an automobile engine

Exothermic and Endothermic Processes: A Particulate View

When a chemical system undergoes a change in enthalpy, where does the energy come from or go to? For example, we just saw that an exothermic chemical reaction gives off *thermal energy*—what is the source of that energy?

First, we know that the emitted thermal energy *does not* come from the original thermal energy of the system. Recall from Section 9.2 that the thermal energy of a system is the total kinetic energy of the atoms and molecules that compose the system. This kinetic energy *cannot* be the source of the energy given off in an exothermic reaction because, if the atoms and molecules that compose the system were to lose kinetic energy, their temperature would necessarily fall—the system would get colder. Yet, we know that in exothermic reactions, the temperature of the system and the surroundings rises. So there must be some other source of energy.

Recall from Section 9.3 that the internal energy of a chemical system is the sum of its kinetic energy and its *potential energy*. This potential energy is the source in an exothermic chemical reaction. Under normal circumstances, chemical potential energy (or simply chemical energy) arises primarily from the electrostatic forces among the protons and electrons that compose the atoms and molecules within the system. In an exothermic reaction, some bonds break and new ones form, and the nuclei and electrons reorganize into an arrangement with lower potential energy. As the molecules rearrange, their potential energy converts into thermal energy, the heat emitted in the reaction. In an endothermic reaction, the opposite happens: As some bonds break and others form, the nuclei and electrons reorganize into an arrangement with higher potential energy, absorbing thermal energy in the process.



9.6

Cc

Conceptual
Connection

Exothermic and Endothermic Reactions

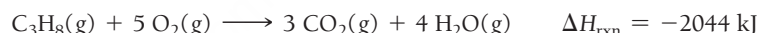
If an endothermic reaction absorbs heat, why does it feel cold to the touch?

Throughout this book, combustion reactions such as this one are written using *gaseous* water as the product because, when we actually burn a hydrocarbon such as propane, water is formed in the gaseous state. Some books use *liquid* water as the product, which gives a moderately different value for ΔH_{rxn} .

Stoichiometry Involving ΔH : Thermochemical Equations

The enthalpy change for a chemical reaction, abbreviated ΔH_{rxn} , is also called the **enthalpy of reaction** or **heat of reaction** and is an extensive property, one that depends on the amount of material undergoing the reaction. In other words, the amount of heat generated or absorbed when a chemical reaction occurs depends on the *amounts* of reactants that actually react. We usually specify ΔH_{rxn} in combination with the balanced chemical equation for the reaction. *The magnitude of ΔH_{rxn} is for the stoichiometric amounts of reactants and products for the reaction as written.*

For example, the balanced equation and ΔH_{rxn} for the combustion of propane (the main component of LP gas) are as follows:

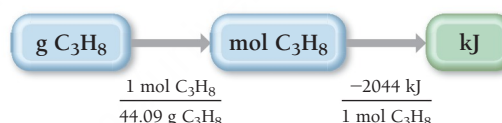


This means that when 1 mol of C_3H_8 reacts with 5 mol of O_2 to form 3 mol of CO_2 and 4 mol of H_2O , 2044 kJ of heat is emitted. We can write these relationships in the same way that we expressed stoichiometric relationships in Chapter 7 as ratios between two quantities. For example, for the reactants, we write:

$$1 \text{ mol C}_3\text{H}_8 : -2044 \text{ kJ} \quad \text{or} \quad 5 \text{ mol O}_2 : -2044 \text{ kJ}$$

These ratios indicate that 2044 kJ of heat evolves when 1 mol of C_3H_8 and 5 mol of O_2 completely react. We can use these ratios to construct conversion factors between amounts of reactants or products and the quantity of heat emitted (for exothermic reactions) or absorbed (for endothermic reactions).

To find out how much heat is emitted upon the combustion of a certain mass in grams of C_3H_8 , we use the following conceptual plan:



We use the molar mass to convert between grams and moles and the stoichiometric relationship between moles of C_3H_8 and the heat of reaction to convert between moles and kilojoules, as demonstrated in Example 9.7.

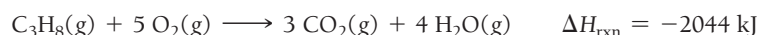
EXAMPLE 9.7

Stoichiometry Involving ΔH

Interactive
Worked Example
Video 9.7



An LP gas tank in a home barbeque contains 13.2 kg of propane, C_3H_8 . Calculate the heat (in kJ) associated with the complete combustion of all of the propane in the tank.

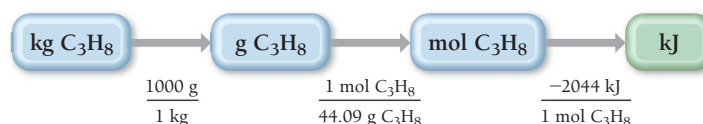


SORT You are given the mass of propane and asked to find the heat evolved in its combustion.

GIVEN: 13.2 kg C_3H_8
FIND: q

STRATEGIZE Starting with kg C_3H_8 , convert to g C_3H_8 and then use the molar mass of C_3H_8 to find the number of moles. Next, use the stoichiometric relationship between mol C_3H_8 and kJ to determine the heat evolved.

CONCEPTUAL PLAN



	RELATIONSHIPS USED $1000 \text{ g} = 1 \text{ kg}$ molar mass $\text{C}_3\text{H}_8 = 44.09 \text{ g/mol}$ $1 \text{ mol C}_3\text{H}_8 : -2044 \text{ kJ}$ (from balanced equation)
SOLVE Follow the conceptual plan to solve the problem. Begin with $13.2 \text{ kg C}_3\text{H}_8$ and multiply by the appropriate conversion factors to arrive at kJ.	SOLUTION $13.2 \text{ kg C}_3\text{H}_8 \times \frac{1000 \text{ g}}{1 \text{ kg}} \times \frac{1 \text{ mol C}_3\text{H}_8}{44.09 \text{ g C}_3\text{H}_8} \times \frac{-2044 \text{ kJ}}{1 \text{ mol C}_3\text{H}_8}$ $= -6.12 \times 10^5 \text{ kJ}$
CHECK The units of the answer (kJ) are correct for energy. The answer is negative, as it should be for heat evolved by the reaction.	
FOR PRACTICE 9.7 Ammonia reacts with oxygen according to the equation: $4 \text{ NH}_3(\text{g}) + 5 \text{ O}_2(\text{g}) \longrightarrow 4 \text{ NO}(\text{g}) + 6 \text{ H}_2\text{O}(\text{g}) \quad \Delta H_{\text{rxn}} = -906 \text{ kJ}$ Calculate the heat (in kJ) associated with the complete reaction of 155 g of NH_3 .	
FOR MORE PRACTICE 9.7 What mass of butane in grams is necessary to produce $1.5 \times 10^3 \text{ kJ}$ of heat? What mass of CO_2 is produced? $\text{C}_4\text{H}_{10}(\text{g}) + \frac{13}{2} \text{ O}_2(\text{g}) \longrightarrow 4 \text{ CO}_2(\text{g}) + 5 \text{ H}_2\text{O}(\text{g}) \quad \Delta H_{\text{rxn}} = -2658 \text{ kJ}$	

9.7 Measuring ΔH for Chemical Reactions: Constant-Pressure Calorimetry

For many aqueous reactions, we can measure ΔH_{rxn} fairly simply using a **coffee-cup calorimeter** shown in **Figure 9.8**. The calorimeter consists of two Styrofoam® coffee cups, one inserted into the other, to provide insulation from the laboratory environment. The calorimeter is equipped with a thermometer and a stirrer. The reaction occurs in a specifically measured quantity of solution within the calorimeter, so that the mass of the solution is known. During the reaction, the heat evolved (or absorbed) causes a temperature change in the solution, which the thermometer measures. If we know the specific heat capacity of the solution, normally assumed to be that of water, we can calculate q_{soln} , the heat absorbed by or lost from the solution (which is acting as the surroundings) using the equation:

$$q_{\text{soln}} = m_{\text{soln}} \times C_{\text{s, soln}} \times \Delta T$$

The insulated calorimeter prevents heat from escaping, so we assume that the heat gained by the solution equals that lost by the reaction (or vice versa):

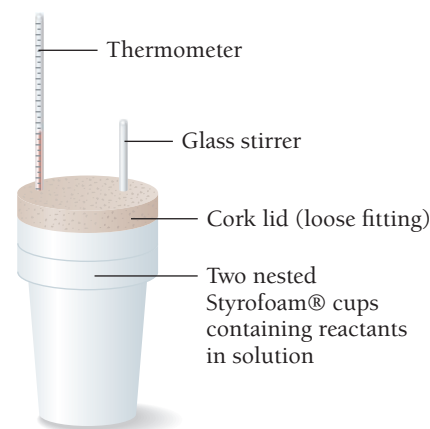
$$q_{\text{rxn}} = -q_{\text{soln}}$$

Because the reaction happens under conditions of constant pressure (open to the atmosphere), $q_{\text{rxn}} = q_p = \Delta H_{\text{rxn}}$ (Equation 9.13). This measured quantity is the heat of reaction for the specific amount (which is measured ahead of time) of reactants that reacted. To get ΔH_{rxn} per mole of a particular reactant—a more general quantity—we divide by the number of moles that actually reacted, as demonstrated in Example 9.8.

Summarizing Calorimetry:

- Bomb calorimetry occurs at constant *volume* and measures ΔE for a reaction.
- Coffee-cup calorimetry occurs at constant *pressure* and measures ΔH for a reaction.

The Coffee-Cup Calorimeter



▲ FIGURE 9.8 The Coffee-Cup Calorimeter A coffee-cup calorimeter measures enthalpy changes for chemical reactions in solution.

The equation, $q_{\text{rxn}} = -q_{\text{soln}}$, assumes that no heat is lost to the calorimeter itself. If heat absorbed by the calorimeter is accounted for, the equation is $q_{\text{rxn}} = -(q_{\text{soln}} + q_{\text{cal}})$.

EXAMPLE 9.8

Measuring ΔH_{rxn} in a Coffee-Cup CalorimeterInteractive
Worked Example
Video 9.8PEARSON
eText
2.0

Magnesium metal reacts with hydrochloric acid according to the balanced equation:



In an experiment to determine the enthalpy change for this reaction, you combine 0.158 g of Mg metal with enough HCl to make 100.0 mL of solution in a coffee-cup calorimeter. The HCl is sufficiently concentrated so that the Mg completely reacts. The temperature of the solution rises from 25.6°C to 32.8°C as a result of the reaction. Find ΔH_{rxn} for the reaction as written. Use 1.00 g/mL as the density of the solution and $C_{\text{s, soln}} = 4.18 \text{ J/g} \cdot ^\circ\text{C}$ as the specific heat capacity of the solution.

SORT You are given the mass of magnesium, the volume of solution, the initial and final temperatures, the density of the solution, and the heat capacity of the solution. You are asked to find the change in enthalpy for the reaction.

STRATEGIZE The conceptual plan has three parts. In the first part, use the temperature change and the other given quantities, together with the equation $q = m \times C_s \times \Delta T$, to find q_{soln} .

In the second part, use q_{soln} to get q_{rxn} (which simply involves changing the sign). Because the pressure is constant, q_{rxn} is equivalent to ΔH_{rxn} for the amount of magnesium that reacts.

In the third part, divide q_{rxn} by the number of moles of magnesium to get ΔH_{rxn} per mole of magnesium.

SOLVE Gather the necessary quantities in the correct units for the equation $q = m \times C_s \times \Delta T$ and substitute into the equation to calculate q_{soln} . Notice that the sign of q_{soln} is positive, meaning that the solution absorbed heat from the reaction.

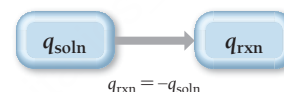
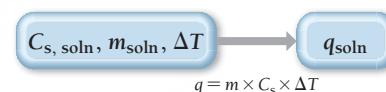
Find q_{rxn} by taking the negative of q_{soln} . Notice that q_{rxn} is negative, as expected for an exothermic reaction.

Finally, find ΔH_{rxn} per mole of magnesium by dividing q_{rxn} by the number of moles of magnesium that reacts. Find the number of moles of magnesium from the given mass of magnesium and its molar mass.

Because the stoichiometric coefficient for magnesium in the balanced chemical equation is 1, the calculated value represents ΔH_{rxn} for the reaction as written.

GIVEN: 0.158 g Mg 100.0 mL soln
 $T_i = 25.6^\circ\text{C}$ $T_f = 32.8^\circ\text{C}$
 $d_{\text{soln}} = 1.00 \text{ g/mL}$ $C_{\text{s, soln}} = 4.18 \text{ J/g} \cdot ^\circ\text{C}$
FIND: ΔH_{rxn}

CONCEPTUAL PLAN



$$\Delta H_{\text{rxn}} = \frac{q_{\text{rxn}}}{\text{mol Mg}}$$

RELATIONSHIPS USED

$$q = m \times C_s \times \Delta T$$

$$q_{\text{rxn}} = -q_{\text{soln}}$$

SOLUTION

$$C_{\text{s, soln}} = 4.18 \text{ J/g} \cdot ^\circ\text{C}$$

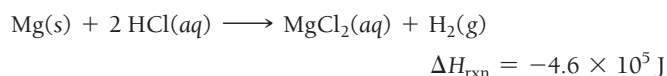
$$m_{\text{soln}} = 100.0 \text{ mL soln} \times \frac{1.00 \text{ g}}{1 \text{ mL soln}} = 1.00 \times 10^2 \text{ g}$$

$$\begin{aligned} \Delta T &= T_f - T_i \\ &= 32.8^\circ\text{C} - 25.6^\circ\text{C} = 7.2^\circ\text{C} \end{aligned}$$

$$\begin{aligned} q_{\text{soln}} &= m_{\text{soln}} \times C_{\text{s, soln}} \times \Delta T \\ &= 1.00 \times 10^2 \text{ g} \times 4.18 \frac{\text{J}}{\text{g} \cdot ^\circ\text{C}} \times 7.2^\circ\text{C} = 3.0 \times 10^3 \text{ J} \end{aligned}$$

$$q_{\text{rxn}} = -q_{\text{soln}} = -3.0 \times 10^3 \text{ J}$$

$$\begin{aligned} \Delta H_{\text{rxn}} &= \frac{q_{\text{rxn}}}{\text{mol Mg}} \\ &= \frac{-3.0 \times 10^3 \text{ J}}{0.158 \text{ g Mg} \times \frac{1 \text{ mol Mg}}{24.31 \text{ g Mg}}} \\ &= -4.6 \times 10^5 \text{ J/mol Mg} \end{aligned}$$



CHECK The units of the answer (J) are correct for the change in enthalpy of a reaction. The sign is negative, as you would expect for an exothermic reaction.

FOR PRACTICE 9.8

The addition of hydrochloric acid to a silver nitrate solution precipitates silver chloride according to the reaction:



When you combine 50.0 mL of 0.100 M AgNO_3 with 50.0 mL of 0.100 M HCl in a coffee-cup calorimeter, the temperature changes from 23.40°C to 24.21°C. Calculate ΔH_{rxn} for the reaction as written. Use 1.00 g/mL as the density of the solution and $C = 4.18 \text{ J/g} \cdot ^\circ\text{C}$ as the specific heat capacity.

Constant-Pressure versus Constant-Volume Calorimetry

The same reaction, with exactly the same amount of reactant, is conducted in a bomb calorimeter and in a coffee-cup calorimeter. In one measurement, $q_{\text{rxn}} = -12.5 \text{ kJ}$ and in the other $q_{\text{rxn}} = -11.8 \text{ kJ}$. Which value was obtained in the bomb calorimeter? (Assume that the reaction has a positive ΔV in the coffee-cup calorimeter.)

9.7
Cc

Conceptual
Connection



9.8 Relationships Involving ΔH_{rxn}

The change in enthalpy for a reaction is always associated with a *particular* reaction. If we change the reaction, then ΔH_{rxn} also changes. We now turn our attention to three quantitative relationships between a chemical equation and ΔH_{rxn} .

1. If a chemical equation is multiplied by some factor, then ΔH_{rxn} is also multiplied by the same factor.

Recall from Section 9.6 that ΔH_{rxn} is an extensive property; it depends on the quantity of reactants undergoing reaction. Recall also that ΔH_{rxn} is usually reported for a reaction involving stoichiometric amounts of reactants. For example, for a reaction $\text{A} + 2 \text{B} \longrightarrow \text{C}$, we typically report ΔH_{rxn} as the amount of heat emitted or absorbed when 1 mol A reacts with 2 mol B to form 1 mol C. Therefore, if a chemical equation is multiplied by a factor, then ΔH_{rxn} is also multiplied by the same factor. For example,

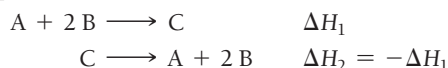


2. If a chemical equation is reversed, then ΔH_{rxn} changes sign.

Recall from Section 9.6 that ΔH_{rxn} is a state function, which means that its value depends only on the initial and final states of the system.

$$\Delta H = H_{\text{final}} - H_{\text{initial}}$$

When a reaction is reversed, the final state becomes the initial state and vice versa. Consequently, ΔH_{rxn} changes sign. For example,



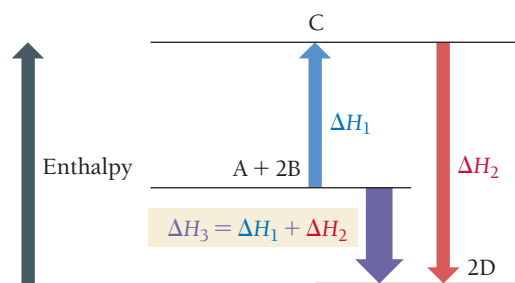
3. If a chemical equation can be expressed as the sum of a series of steps, then ΔH_{rxn} for the overall equation is the sum of the heats of reactions for each step.

This last relationship, known as **Hess's law**, follows from the enthalpy of reaction being a state function. Because ΔH_{rxn} is dependent only on the initial and final states, and not on the pathway the reaction follows, ΔH obtained from summing the individual steps that lead to an overall reaction must be the same as ΔH for that overall reaction. For example,



Hess's Law

The change in enthalpy for a stepwise process is the sum of the enthalpy changes of the steps.



▲ **FIGURE 9.9 Hess's Law** The change in enthalpy for a stepwise process is the sum of the enthalpy changes of the steps.

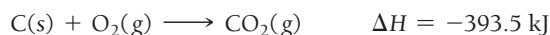
We illustrate Hess's law with the energy-level diagram shown in **Figure 9.9** ◀.

These three quantitative relationships make it possible to determine ΔH for a reaction without directly measuring it in the laboratory. (For some reactions, direct measurement can be difficult.) If we can find related reactions (with known ΔH values) that sum to the reaction of interest, we can find ΔH for the reaction of interest.

For example, the reaction between $C(s)$ and $H_2O(g)$ is an industrially important method of generating hydrogen gas:

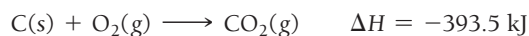


We can find ΔH_{rxn} from the following reactions with known ΔH values:

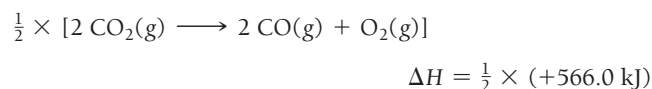


We just have to determine how to sum these reactions to get the overall reaction of interest. We do this by manipulating the reactions with known ΔH values in such a way as to get the reactants of interest on the left, the products of interest on the right, and other species to cancel.

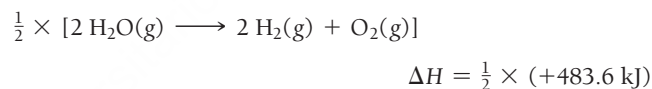
Because the first reaction has $C(s)$ as a reactant, and the reaction of interest also has $C(s)$ as a reactant, we write the first reaction unchanged.



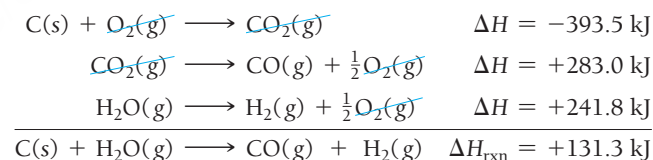
The second reaction has 2 mol of $CO(g)$ as a reactant. However, the reaction of interest has 1 mol of $CO(g)$ as a product. Therefore, we reverse the second reaction, change the sign of ΔH , and multiply the reaction and ΔH by $\frac{1}{2}$.



The third reaction has $H_2(g)$ as a reactant. In the reaction of interest, however, $H_2(g)$ is a product. Therefore, we reverse the equation and change the sign of ΔH . In addition, to obtain coefficients that match the reaction of interest, and to cancel O_2 , we must multiply the reaction and ΔH by $\frac{1}{2}$.



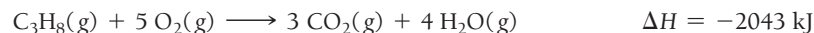
Lastly, we rewrite the three reactions after multiplying through by the indicated factors and show how they sum to the reaction of interest. ΔH for the reaction of interest is the sum of the ΔH values for the steps.

**EXAMPLE 9.9****Hess's Law**

Find ΔH_{rxn} for the reaction:



Use these reactions with known ΔH values:

**SOLUTION**

To solve this and other Hess's law problems, you manipulate the reactions with known ΔH values in such a way as to get the reactants of interest on the left, the products of interest on the right, and other species to cancel.

The first reaction has C ₃ H ₈ as a reactant, and the reaction of interest has C ₃ H ₈ as a product, so you can reverse the first reaction and change the sign of Δ <i>H</i> .	$3 \text{ CO}_2(\text{g}) + 4 \text{ H}_2\text{O}(\text{g}) \longrightarrow \text{C}_3\text{H}_8(\text{g}) + 5 \text{ O}_2(\text{g}) \quad \Delta H = +2043 \text{ kJ}$
The second reaction has carbon as a reactant and CO ₂ as a product, as required in the reaction of interest. However, the coefficient for C is 1, and in the reaction of interest, the coefficient for C is 3. You need to multiply this equation and its Δ <i>H</i> by 3.	$3 \times [\text{C}(\text{s}) + \text{O}_2(\text{g}) \longrightarrow \text{CO}_2(\text{g})] \quad \Delta H = 3 \times (-393.5 \text{ kJ})$
The third reaction has H ₂ (g) as a reactant, as required. However, the coefficient for H ₂ is 2, and in the reaction of interest, the coefficient for H ₂ is 4. Multiply this reaction and its Δ <i>H</i> by 2.	$2 \times [2 \text{ H}_2(\text{g}) + \text{O}_2(\text{g}) \longrightarrow 2 \text{ H}_2\text{O}(\text{g})] \quad \Delta H = 2 \times (-483.6 \text{ kJ})$
Lastly, rewrite the three reactions after multiplying by the indicated factors and show how they sum to the reaction of interest. Δ <i>H</i> for the reaction of interest is the sum of the Δ <i>H</i> values for the steps.	$ \begin{array}{rcl} 3 \text{ CO}_2(\text{g}) + 4 \text{ H}_2\text{O}(\text{g}) & \longrightarrow & \text{C}_3\text{H}_8(\text{g}) + 5 \text{ O}_2(\text{g}) \quad \Delta H = +2043 \text{ kJ} \\ 3 \text{ C}(\text{s}) + 3 \text{ O}_2(\text{g}) & \longrightarrow & 3 \text{ CO}_2(\text{g}) \quad \Delta H = -1181 \text{ kJ} \\ 4 \text{ H}_2(\text{g}) + 2 \text{ O}_2(\text{g}) & \longrightarrow & 4 \text{ H}_2\text{O}(\text{g}) \quad \Delta H = -967.2 \text{ kJ} \\ \hline 3 \text{ C}(\text{s}) + 4 \text{ H}_2(\text{g}) & \longrightarrow & \text{C}_3\text{H}_8(\text{g}) \quad \Delta H_{\text{rxn}} = -105 \text{ kJ} \end{array} $
<p>FOR PRACTICE 9.9</p> <p>Find Δ<i>H</i>_{rxn} for the reaction:</p> $\text{N}_2\text{O}(\text{g}) + \text{NO}_2(\text{g}) \longrightarrow 3 \text{ NO}(\text{g})$ <p>Use these reactions with known Δ<i>H</i> values:</p> $ \begin{array}{rcl} 2 \text{ NO}(\text{g}) + \text{O}_2(\text{g}) & \longrightarrow & 2 \text{ NO}_2(\text{g}) \quad \Delta H = -113.1 \text{ kJ} \\ \text{N}_2(\text{g}) + \text{O}_2(\text{g}) & \longrightarrow & 2 \text{ NO}(\text{g}) \quad \Delta H = +182.6 \text{ kJ} \\ 2 \text{ N}_2\text{O}(\text{g}) & \longrightarrow & 2 \text{ N}_2(\text{g}) + \text{O}_2(\text{g}) \quad \Delta H = -163.2 \text{ kJ} \end{array} $	
<p>FOR MORE PRACTICE 9.9</p> <p>Find Δ<i>H</i>_{rxn} for the reaction:</p> $3 \text{ H}_2(\text{g}) + \text{O}_3(\text{g}) \longrightarrow 3 \text{ H}_2\text{O}(\text{g})$ <p>Use these reactions with known Δ<i>H</i> values:</p> $ \begin{array}{rcl} 2 \text{ H}_2(\text{g}) + \text{O}_2(\text{g}) & \longrightarrow & 2 \text{ H}_2\text{O}(\text{g}) \quad \Delta H = -483.6 \text{ kJ} \\ 3 \text{ O}_2(\text{g}) & \longrightarrow & 2 \text{ O}_3(\text{g}) \quad \Delta H = +285.4 \text{ kJ} \end{array} $	

9.9 Determining Enthalpies of Reaction from Bond Energies

In Section 9.7, we saw that we can *measure* Δ*H* for a chemical reaction with calorimetry. In this section we turn to *estimating* Δ*H* for a chemical reaction from bond energies.

We saw in Section 9.6 that the energy changes associated with chemical reactions correspond to potential energy changes in the particles that compose atoms and molecules. In other words, during a chemical reaction, the *structure* of the particles that compose matter changes. That structure change causes a potential energy change that results in an energy exchange with the surroundings.

We can estimate the magnitude and sign of the energy exchange associated with a particular chemical reaction by focusing on the bonds that are broken and formed during the reaction. Recall from Section 5.6 that, based on experimental measurements, we can assign energies to specific bonds within a molecule (Table 9.3). These bond energies correspond to the amount of energy *necessary to break* the particular chemical bond, but they also correspond to the amount of energy *emitted* when the bond is formed. Therefore, by adding the energies associated with the bonds that break in a reaction (remember that

endothermic processes such as bond breaking carry a positive sign), and subtracting the energies associated with the bonds that form (remember that exothermic processes such as bond formation carry a negative sign), we can estimate the overall ΔH for a reaction.

For example, consider the reaction between methane and chlorine:



We can imagine this reaction occurring by the breaking of a C—H bond and a Cl—Cl bond and the forming of a C—Cl bond and a H—Cl bond. So we can calculate the overall enthalpy change as a sum

TABLE 9.3 Average Bond Energies

Bond	Bond Energy (kJ/mol)	Bond	Bond Energy (kJ/mol)	Bond	Bond Energy (kJ/mol)
H—H	436	N—N	163	Br—F	237
H—C	414	N=N	418	Br—Cl	218
H—N	389	N≡N	946	Br—Br	193
H—O	464	N—O	222	I—Cl	208
H—S	368	N=O	590	I—Br	175
H—F	565	N—F	272	I—I	151
H—Cl	431	N—Cl	200	Si—H	323
H—Br	364	N—Br	243	Si—Si	226
H—I	297	N—I	159	Si—C	301
C—C	347	O—O	142	S—O	265
C=C	611	O=O	498	Si=O	368
C≡C	837	O—F	190	S=O	523
C—N	305	O—Cl	203	Si—Cl	464
C=N	615	O—I	234	S=S	418
C≡N	891	F—F	159	S—F	327
C—O	360	Cl—F	253	S—Cl	253
C=O	736*	Cl—Cl	243	S—Br	218
C≡O	1072			S—S	266
C—Cl	339				

*799 in CO₂

of the enthalpy changes associated with breaking the required bonds in the reactants and forming the required bonds in the products, as shown in **Figure 9.10**.



Bonds Broken		Bonds Formed	
C—H break	+414 kJ	C—Cl form	−339 kJ
Cl—Cl break	+243 kJ	H—Cl form	−431 kJ
<i>Sum (Σ)ΔHs bonds broken: +657 kJ</i>		<i>Sum (Σ)ΔHs bonds formed: −770 kJ</i>	
$\Delta H_{\text{rxn}} = \Sigma(\Delta Hs \text{ bonds broken}) + \Sigma(\Delta Hs \text{ bonds formed})$			
$= +657 \text{ kJ} - 770 \text{ kJ} = -113 \text{ kJ}$			

Using this method, we determine that $\Delta H_{\text{rxn}} = -113 \text{ kJ}$. The actual $\Delta H_{\text{rxn}}^\circ = -101 \text{ kJ}$, which is fairly close to the value we obtained from average bond energies. Bond energies don't give exact values for the change in enthalpy of a reaction because bond energies are average values obtained from

Estimating the Enthalpy Change of a Reaction from Bond Energies

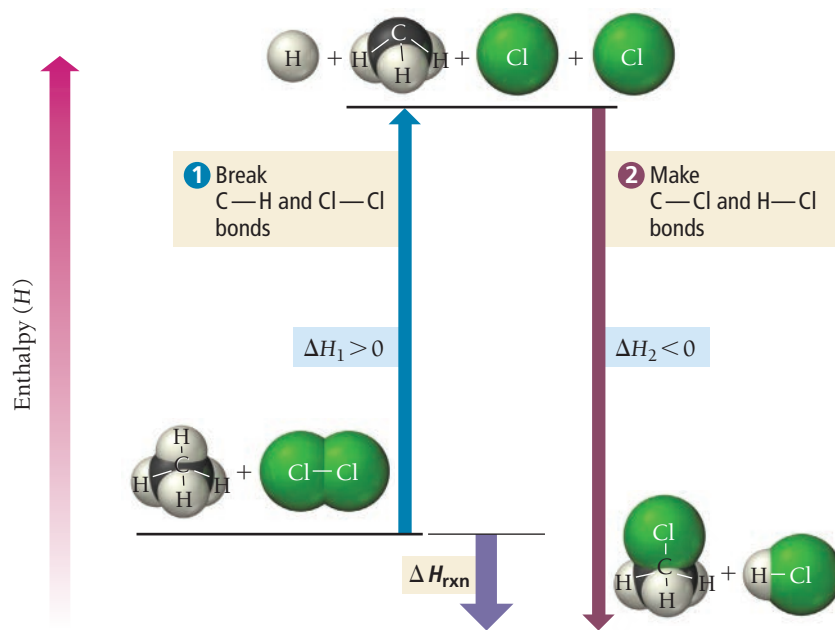


FIGURE 9.10 Estimating ΔH_{rxn} from Bond Energies We can approximate the enthalpy change of a reaction by summing the enthalpy changes involved in breaking old bonds and forming new ones.

measurements on many different molecules. Nonetheless, we can estimate ΔH_{rxn} from average bond energies fairly accurately by summing the ΔH values for the bonds broken and bonds formed. Remember that ΔH is positive for breaking bonds and negative for forming bonds.

$$\Delta H_{\text{rxn}} = \underbrace{\sum(\Delta H_{\text{s bonds broken}})}_{\text{Positive}} + \underbrace{\sum(\Delta H_{\text{s bonds formed}})}_{\text{Negative}}$$

As we can see from the above equation:

- A reaction is *exothermic* when weak bonds break and strong bonds form.
- A reaction is *endothermic* when strong bonds break and weak bonds form.

Scientists sometimes say that “energy is stored in chemical bonds or in a chemical compound,” which may make it sound as if breaking the bonds in the compound releases energy. For example, in biology we often hear that energy is stored in glucose or in ATP. However, *breaking a chemical bond always requires energy*. When we say that energy is stored in a compound or that a compound is energy rich, we mean that the compound can undergo a reaction in which weak bonds break and strong bonds form, thereby releasing energy in the overall process. *Bond formation always releases energy*.

Bond Energies and ΔH_{rxn}

9.8
Cc

Conceptual
Connection

PEARSON
eText
2.0

The reaction between hydrogen and oxygen to form water is highly exothermic. Which statement is true of the energies of the bonds that break and form during the reaction?

- The energy required to break the required bonds is greater than the energy released when the new bonds form.
- The energy required to break the required bonds is less than the energy released when the new bonds form.
- The energy required to break the required bonds is about the same as the energy released when the new bonds form.

EXAMPLE 9.10

Calculating ΔH_{rxn} from Bond EnergiesInteractive
Worked Example
Video 9.10PEARSON
eText
2.0

Hydrogen gas, a potential fuel, can be made by the reaction of methane gas and steam:



Use bond energies to calculate ΔH_{rxn} for this reaction.

SOLUTION

Begin by rewriting the reaction using the Lewis structures of the molecules involved.	$\begin{array}{c} \text{H} \\ \\ \text{H}-\text{C}-\text{H} \\ \\ \text{H} \end{array} + 2 \text{H}-\ddot{\text{O}}-\text{H} \longrightarrow 4 \text{H}-\text{H} + \ddot{\text{O}}=\text{C}=\ddot{\text{O}}$
Determine which bonds are broken in the reaction and sum the bond energies of these. (Find bond energies in Table 9.3.)	$\begin{array}{c} \text{H} \\ \\ \text{H}-\text{C}-\text{H} \\ \\ \text{H} \end{array} + 2 \text{H}-\ddot{\text{O}}-\text{H}$ $\Sigma(\Delta H_{\text{s bonds broken}})$ $= 4(\text{C}-\text{H}) + 4(\text{O}-\text{H}) = 4(414 \text{ kJ}) + 4(464 \text{ kJ}) = 3512 \text{ kJ}$
Determine which bonds are formed in the reaction and sum the negatives of their bond energies.	$4 \text{H}-\text{H} + \ddot{\text{O}}=\text{C}=\ddot{\text{O}}$ $\Sigma(\Delta H_{\text{s bonds formed}})$ $= -4(\text{H}-\text{H}) - 2(\text{C}=\text{O}) = -4(436 \text{ kJ}) - 2(799 \text{ kJ}) = -3342 \text{ kJ}$
Find ΔH_{rxn} by summing the results of the previous two steps.	$\Delta H_{\text{rxn}} = \Sigma(\Delta H_{\text{s bonds broken}}) + \Sigma(\Delta H_{\text{s bonds formed}})$ $= 3512 - 3342 = 1.70 \times 10^2 \text{ kJ}$

FOR PRACTICE 9.10

Another potential future fuel is methanol (CH_3OH). Write a balanced equation for the combustion of gaseous methanol and use bond energies to calculate the enthalpy of combustion of methanol in kJ/mol.

FOR MORE PRACTICE 9.10

Use bond energies to calculate ΔH_{rxn} for this reaction: $\text{N}_2(\text{g}) + 3 \text{H}_2(\text{g}) \longrightarrow 2 \text{NH}_3(\text{g})$.

9.10 Determining Enthalpies of Reaction from Standard Enthalpies of Formation

We have examined how to measure ΔH for a chemical reaction directly through calorimetry and how to infer ΔH for a reaction from related reactions through Hess's law. We have also seen how to estimate ΔH for a reaction from bond energies. We now turn to a fourth and more convenient way to determine ΔH for a large number of chemical reactions: from tabulated *standard enthalpies of formation*.

Standard States and Standard Enthalpy Changes

Recall that ΔH is the *change* in enthalpy for a chemical reaction—the difference in enthalpy between the products and the reactants. Because we are interested in changes in enthalpy (and not in absolute values of enthalpy itself), we are free to define the *zero* of enthalpy as conveniently as possible. Returning to our mountain-climbing analogy from Section 9.3, a change in altitude (like a change in enthalpy) is an absolute quantity. Altitude itself (like enthalpy), however, is a relative quantity, defined relative to some standard (such as sea level in the case of altitude). We define a similar, albeit slightly more complex, standard for enthalpy. This standard has three parts: the **standard state**, the **standard enthalpy change** (ΔH°), and the **standard enthalpy (or heat) of formation** (ΔH_f°).

1. Standard State

- *For a Gas:* The standard state for a gas is the pure gas at a pressure of exactly 1 atm.
- *For a Liquid or Solid:* The standard state for a liquid or solid is the pure substance in its most stable form at a pressure of 1 atm and at the temperature of interest (often taken to be 25°C).
- *For a Substance in Solution:* The standard state for a substance in solution is a concentration of exactly 1 M.

2. Standard Enthalpy Change (ΔH°)

- The change in enthalpy for a process when all reactants and products are in their standard states. The degree sign indicates standard states.

3. Standard Enthalpy of Formation (ΔH_f°)

- *For a Pure Compound:* The change in enthalpy when 1 mol of the compound forms from its constituent elements in their standard states.
- *For a Pure Element in Its Standard State:* $\Delta H_f^\circ = 0$.

The standard enthalpy of formation is also called the **standard heat of formation**.

Assigning the value of zero to the standard enthalpy of formation for an element in its standard state is the equivalent of assigning an altitude of zero to sea level. Once we assume sea level is zero, we can measure all subsequent changes in altitude relative to sea level. Similarly, we can measure all changes in enthalpy relative to those of pure elements in their standard states.

For example, consider the standard enthalpy of formation of methane gas at 25°C:



For methane, as with most compounds, ΔH_f° is negative. Continuing our analogy, if we think of pure elements in their standard states as being at *sea level*, then most compounds lie *below sea level*. We always write the chemical equation for the enthalpy of formation of a compound to form 1 mol of the compound, so ΔH_f° has the units of kJ/mol. Table 9.4 lists ΔH_f° values for selected compounds. A more comprehensive list is in Appendix IIB.

The standard state was changed in 1997 to a pressure of 1 bar, which is very close to 1 atm (1 atm = 1.013 bar). Both standards are now in common use.

The carbon in this equation must be graphite (the most stable form of carbon at 1 atm and 25°C).

EXAMPLE 9.11

Standard Enthalpies of Formation

Write equations for the formation of (a) $\text{MgCO}_3(\text{s})$ and (b) $\text{C}_6\text{H}_{12}\text{O}_6(\text{s})$ from their respective elements in their standard states. Include the value of ΔH_f° for each equation.

SOLUTION

<p>(a) $\text{MgCO}_3(\text{s})$</p> <p>Write the equation with the constituent elements in MgCO_3 in their standard states as the reactants and 1 mol of MgCO_3 as the product.</p> <p>Balance the equation and look up ΔH_f° in Appendix IIB. (Use fractional coefficients so that the product of the reaction is 1 mol of MgCO_3.)</p>	$\text{Mg(s)} + \text{C(s, graphite)} + \text{O}_2(\text{g}) \longrightarrow \text{MgCO}_3(\text{s})$ $\text{Mg(s)} + \text{C(s, graphite)} + \frac{3}{2} \text{O}_2(\text{g}) \longrightarrow \text{MgCO}_3(\text{s})$ $\Delta H_f^\circ = -1095.8 \text{ kJ/mol}$
<p>(b) $\text{C}_6\text{H}_{12}\text{O}_6(\text{s})$</p> <p>Write the equation with the constituent elements in $\text{C}_6\text{H}_{12}\text{O}_6$ in their standard states as the reactants and 1 mol of $\text{C}_6\text{H}_{12}\text{O}_6$ as the product.</p> <p>Balance the equation and look up ΔH_f° in Appendix IIB.</p>	$\text{C(s, graphite)} + \text{H}_2(\text{g}) + \text{O}_2(\text{g}) \longrightarrow \text{C}_6\text{H}_{12}\text{O}_6(\text{s})$ $6 \text{C(s, graphite)} + 6 \text{H}_2(\text{g}) + 3 \text{O}_2(\text{g}) \longrightarrow \text{C}_6\text{H}_{12}\text{O}_6(\text{s})$ $\Delta H_f^\circ = -1273.3 \text{ kJ/mol}$

FOR PRACTICE 9.11

Write equations for the formation of (a) NaCl(s) and (b) $\text{Pb(NO}_3)_2(\text{s})$ from their respective elements in their standard states. Include the value of ΔH_f° for each equation.

TABLE 9.4 Standard Enthalpies (or Heats) of Formation, ΔH_f° , at 298 K

Formula	ΔH_f° (kJ/mol)	Formula	ΔH_f° (kJ/mol)	Formula	ΔH_f° (kJ/mol)
Bromine		C ₃ H ₈ O(l, isopropanol)	−318.1	Oxygen	
Br(g)	111.9	C ₆ H ₆ (l)	49.1	O ₂ (g)	0
Br ₂ (l)	0	C ₆ H ₁₂ O ₆ (s, glucose)	−1273.3	O ₃ (g)	142.7
HBr(g)	−36.3	C ₁₂ H ₂₂ O ₁₁ (s, sucrose)	−2226.1	H ₂ O(g)	−241.8
Calcium		Chlorine		H ₂ O(l)	−285.8
Ca(s)	0	Cl(g)	121.3	Silver	
CaO(s)	−634.9	Cl ₂ (g)	0	Ag(s)	0
CaCO ₃ (s)	−1207.6	HCl(g)	−92.3	AgCl(s)	−127.0
Carbon		Fluorine		Sodium	
C(s, graphite)	0	F(g)	79.38	Na(s)	0
C(s, diamond)	1.88	F ₂ (g)	0	Na(g)	107.5
CO(g)	−110.5	HF(g)	−273.3	NaCl(s)	−411.2
CO ₂ (g)	−393.5	Hydrogen		Na ₂ CO ₃ (s)	−1130.7
CH ₄ (g)	−74.6	H(g)	218.0	NaHCO ₃ (s)	−950.8
CH ₃ OH(l)	−238.6	H ₂ (g)	0	Sulfur	
C ₂ H ₂ (g)	227.4	Nitrogen		S ₈ (s, rhombic)	0
C ₂ H ₄ (g)	52.4	N ₂ (g)	0	S ₈ (s, monoclinic)	0.3
C ₂ H ₆ (g)	−84.68	NH ₃ (g)	−45.9	SO ₂ (g)	−296.8
C ₂ H ₅ OH(l)	−277.6	NH ₄ NO ₃ (s)	−365.6	SO ₃ (g)	−395.7
C ₃ H ₈ (g)	−103.85	NO(g)	91.3	H ₂ SO ₄ (l)	−814.0
C ₃ H ₆ O(l, acetone)	−248.4	N ₂ O(g)	81.6		

Calculating the Standard Enthalpy Change for a Reaction

We have just seen that the standard enthalpy of formation corresponds to the *formation* of a compound from its constituent elements in their standard states:



Therefore, the *negative* of the standard enthalpy of formation corresponds to the *decomposition* of a compound into its constituent elements in their standard states:



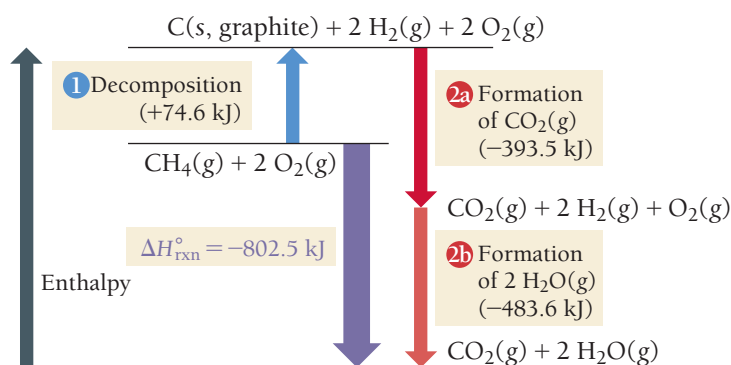
We can use these two concepts—the decomposition of a compound into its elements and the formation of a compound from its elements—to calculate the enthalpy change of any reaction by mentally taking the reactants through two steps. In the first step we *decompose the reactants* into their constituent elements in their standard states; in the second step we *form the products* from the constituent elements in their standard states:

reactants → elements $\Delta H_1 = -\sum \Delta H_f^\circ (\text{reactants})$

elements → products $\Delta H_2 = +\sum \Delta H_f^\circ (\text{products})$

reactants → products $\Delta H_{\text{rxn}}^\circ = \Delta H_1 + \Delta H_2$

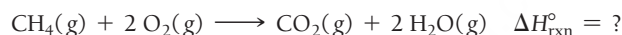
Calculating the Enthalpy Change for the Combustion of Methane



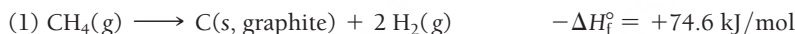
◀ **FIGURE 9.11** Calculating the Enthalpy Change for the Combustion of Methane

In these equations, Σ means “the sum of” so that ΔH_1 is the sum of the negatives of the heats of formation of the reactants and ΔH_2 is the sum of the heats of formation of the products.

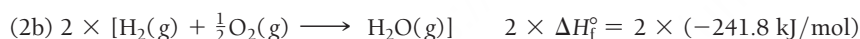
We can demonstrate this procedure by calculating the standard enthalpy change ($\Delta H_{\text{rxn}}^\circ$) for the combustion of methane:



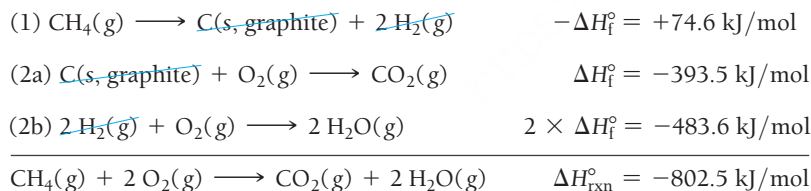
The enthalpy changes associated with the decomposition of the reactants and the formation of the products are shown in **Figure 9.11** ▲. The first step (1) is the decomposition of 1 mol of methane into its constituent elements in their standard states. We can obtain the change in enthalpy for this step by reversing the enthalpy of formation equation for methane and changing the sign of ΔH_f° :



The second step, the formation of the products from their constituent elements, has two parts: (2a) the formation of 1 mol CO_2 and (2b) the formation of 2 mol H_2O . Because part (2b) forms 2 mol H_2O , we multiply the ΔH_f° for that step by 2:



As we know from Hess’s law, the enthalpy of reaction for the overall reaction is the sum of the enthalpies of reaction of the individual steps:



We can streamline and generalize this process as follows:

To calculate $\Delta H_{\text{rxn}}^\circ$, subtract the enthalpies of formation of the reactants multiplied by their stoichiometric coefficients from the enthalpies of formation of the products multiplied by their stoichiometric coefficients.

In the form of an equation,

$$\Delta H_{\text{rxn}}^\circ = \Sigma n_p \Delta H_f^\circ(\text{products}) - \Sigma n_r \Delta H_f^\circ(\text{reactants}) \quad [9.14]$$

In this equation, n_p represents the stoichiometric coefficients of the products, n_r represents the stoichiometric coefficients of the reactants, and ΔH_f° represents the standard enthalpies of formation. Keep in mind when using this equation that elements in their standard states have $\Delta H_f^\circ = 0$. Examples 9.12 and 9.13 demonstrate this process.

EXAMPLE 9.12

 $\Delta H_{\text{rxn}}^\circ$ and Standard Enthalpies of FormationInteractive
Worked Example
Video 9.12PEARSON
eText
2.0

Use the standard enthalpies of formation to determine $\Delta H_{\text{rxn}}^\circ$ for the reaction.



SORT You are given the balanced equation and asked to find the enthalpy of reaction.

GIVEN: $4 \text{NH}_3(\text{g}) + 5 \text{O}_2(\text{g}) \longrightarrow 4 \text{NO}(\text{g}) + 6 \text{H}_2\text{O}(\text{g})$
FIND: $\Delta H_{\text{rxn}}^\circ$

STRATEGIZE To calculate $\Delta H_{\text{rxn}}^\circ$ from standard enthalpies of formation, subtract the heats of formation of the reactants multiplied by their stoichiometric coefficients from the heats of formation of the products multiplied by their stoichiometric coefficients.

CONCEPTUAL PLAN

$$\Delta H_{\text{rxn}}^\circ = \sum n_p \Delta H_f^\circ (\text{products}) - \sum n_r \Delta H_f^\circ (\text{reactants})$$

SOLVE Begin by looking up (in Appendix IIB) the standard enthalpy of formation for each reactant and product. Remember that the standard enthalpy of formation of pure elements in their standard state is zero. Calculate $\Delta H_{\text{rxn}}^\circ$ by substituting into the equation.

SOLUTION

Reactant or product	ΔH_f° (kJ/mol, from Appendix IIB)
$\text{NH}_3(\text{g})$	−45.9
$\text{O}_2(\text{g})$	0.0
$\text{NO}(\text{g})$	+91.3
$\text{H}_2\text{O}(\text{g})$	−241.8

$$\begin{aligned} \Delta H_{\text{rxn}}^\circ &= \sum n_p \Delta H_f^\circ (\text{products}) - \sum n_r \Delta H_f^\circ (\text{reactants}) \\ &= [4(\Delta H_f^\circ \text{NO}(\text{g})) + 6(\Delta H_f^\circ \text{H}_2\text{O}(\text{g}))] - [4(\Delta H_f^\circ \text{NH}_3(\text{g})) + 5(\Delta H_f^\circ \text{O}_2(\text{g}))] \\ &= [4(+91.3 \text{ kJ}) + 6(-241.8 \text{ kJ})] - [4(-45.9 \text{ kJ}) + 5(0.0 \text{ kJ})] \\ &= -1085.6 \text{ kJ} - (-183.6 \text{ kJ}) \\ &= -902.0 \text{ kJ} \end{aligned}$$

CHECK The units of the answer (kJ) are correct. The answer is negative, which means that the reaction is exothermic.

FOR PRACTICE 9.12

The thermite reaction, in which powdered aluminum reacts with iron(III) oxide, is highly exothermic.



Use standard enthalpies of formation to find $\Delta H_{\text{rxn}}^\circ$ for the thermite reaction.

► The reaction of powdered aluminum with iron(III) oxide, known as the thermite reaction, releases a large amount of heat.



EXAMPLE 9.13

$\Delta H^\circ_{\text{rxn}}$ and Standard Enthalpies of Formation

A city of 100,000 people uses approximately 1.0×10^{11} kJ of energy per day. Suppose all of the city's energy comes from the combustion of liquid octane (C_8H_{18}) to form gaseous water and gaseous carbon dioxide. Use standard enthalpies of formation to calculate $\Delta H^\circ_{\text{rxn}}$ for the combustion of octane and determine how many kilograms of octane are necessary to provide this amount of energy.

SORT You are given the amount of energy used and asked to find the mass of octane required to produce the energy.

GIVEN: 1.0×10^{11} kJ
FIND: kg C_8H_{18}

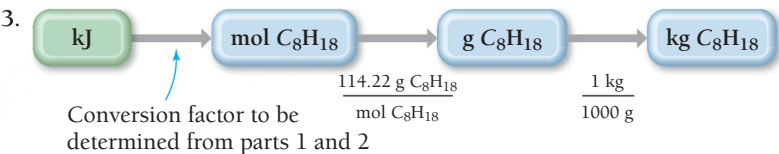

STRATEGIZE The conceptual plan has three parts. In the first part, write a balanced equation for the combustion of octane.

In the second part, calculate $\Delta H^\circ_{\text{rxn}}$ from the ΔH°_f values of the reactants and products.

In the third part, convert from kilojoules of energy to moles of octane using the conversion factor found in part 2, and then convert from moles of octane to mass of octane using the molar mass.

CONCEPTUAL PLAN

1. Write balanced equation.




RELATIONSHIPS USED

molar mass $\text{C}_8\text{H}_{18} = 114.22 \text{ g/mol}$
 $1 \text{ kg} = 1000 \text{ g}$

SOLVE Begin by writing the balanced equation for the combustion of octane. For convenience, do not clear the $\frac{25}{2}$ fraction in order to keep the coefficient on octane as 1.

SOLUTION PART 1



Look up (in Appendix IIB) the standard enthalpy of formation for each reactant and product and calculate $\Delta H^\circ_{\text{rxn}}$.

SOLUTION PART 2

Reactant or product	ΔH°_f (kJ/mol, from Appendix IIB)
$\text{C}_8\text{H}_{18}(\text{l})$	-250.1
$\text{O}_2(\text{g})$	0.0
$\text{CO}_2(\text{g})$	-393.5
$\text{H}_2\text{O}(\text{g})$	-241.8

$$\begin{aligned} \Delta H^\circ_{\text{rxn}} &= \sum n_p \Delta H^\circ_f (\text{products}) - \sum n_r \Delta H^\circ_f (\text{reactants}) \\ &= [8(\Delta H^\circ_{f, \text{CO}_2(\text{g})}) + 9(\Delta H^\circ_{f, \text{H}_2\text{O}(\text{g})})] - [1(\Delta H^\circ_{f, \text{C}_8\text{H}_{18}(\text{l})}) + \frac{25}{2}(\Delta H^\circ_{f, \text{O}_2(\text{g})})] \\ &= [8(-393.5 \text{ kJ}) + 9(-241.8 \text{ kJ})] - [1(-250.1 \text{ kJ}) + \frac{25}{2}(0.0 \text{ kJ})] \\ &= -5324.2 \text{ kJ} - (-250.1 \text{ kJ}) \\ &= -5074.1 \text{ kJ} \end{aligned}$$

From parts 1 and 2 of the conceptual plan, build a conversion factor between mol C₈H₁₈ and kJ.

Follow part 3 of the conceptual plan. Begin with -1.0×10^{11} kJ (because the city uses this much energy, the reaction must emit this amount, and therefore the sign is negative) and follow the steps to determine kg octane.

SOLUTION PART 3

1 mol C₈H₁₈ : -5074.1 kJ

$$-1.0 \times 10^{11} \text{ kJ} \times \frac{1 \text{ mol } \cancel{\text{C}_8\text{H}_{18}}}{-5074.1 \text{ kJ}} \times \frac{114.22 \text{ g } \text{C}_8\text{H}_{18}}{1 \text{ mol } \cancel{\text{C}_8\text{H}_{18}}} \times \frac{1 \text{ kg}}{1000 \text{ g}} = 2.3 \times 10^6 \text{ kg C}_8\text{H}_{18}$$

CHECK The units of the answer (kg C₈H₁₈) are correct. The answer is positive, as it should be for mass. The magnitude is fairly large, as you would expect because this amount of octane is supposed to provide the energy for an entire city.

FOR PRACTICE 9.13

Chemical hand warmers popular with skiers and snowboarders produce heat when they are removed from their airtight plastic wrappers. They utilize the oxidation of iron to form iron(III) oxide according to the reaction: $4 \text{ Fe(s)} + 3 \text{ O}_2\text{(g)} \longrightarrow 2 \text{ Fe}_2\text{O}_3\text{(s)}$. Calculate $\Delta H_{\text{rxn}}^\circ$ for this reaction and calculate how much heat is produced from a hand warmer containing 15.0 g of iron powder.

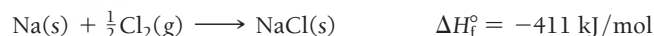
9.11 Lattice Energies for Ionic Compounds

As we discussed in Section 4.5, the formation of an ionic compound from its constituent elements is usually quite exothermic because of lattice energy—the energy associated with the formation of a crystalline lattice of alternating cations and anions from the gaseous ions (see Figure 4.5). In this section of the chapter we examine how to calculate lattice energy for an ionic compound and two trends in lattice energy.

Calculating Lattice Energy: The Born–Haber Cycle

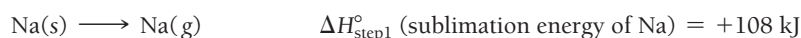
The **Born–Haber cycle** is a hypothetical series of steps that represents the formation of an ionic compound from its constituent elements. The steps are chosen so that the change in enthalpy of each step is known except for that of the last step, which is the lattice energy. The change in enthalpy for the overall process is also known. Using Hess's law (see Section 9.8), we can determine the enthalpy change for the unknown last step, the lattice energy.

Consider the formation of NaCl from its constituent elements in their standard states. The enthalpy change for the overall reaction is the standard enthalpy of formation of NaCl(s).



Consider the following set of steps—the Born–Haber cycle—from which NaCl(s) can also be made from Na(s) and Cl₂(g):

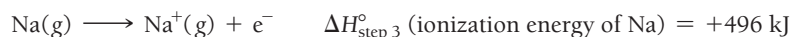
- Step 1 is the formation of gaseous sodium from solid sodium.



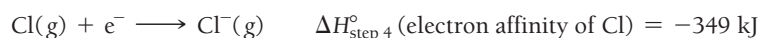
- Step 2 is the formation of a chlorine atom from a chlorine molecule.



- Step 3 is the ionization of gaseous sodium. The enthalpy change for this step is the ionization energy of sodium.



- Step 4 is the addition of an electron to gaseous chlorine. The enthalpy change for this step is the electron affinity of chlorine.



The sublimation energy is the energy required to convert 1 mol of substance from a solid to gas.

- Step 5 is the formation of the crystalline solid from the gaseous ions. The enthalpy change for this step is the lattice energy, the unknown quantity.

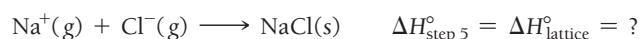


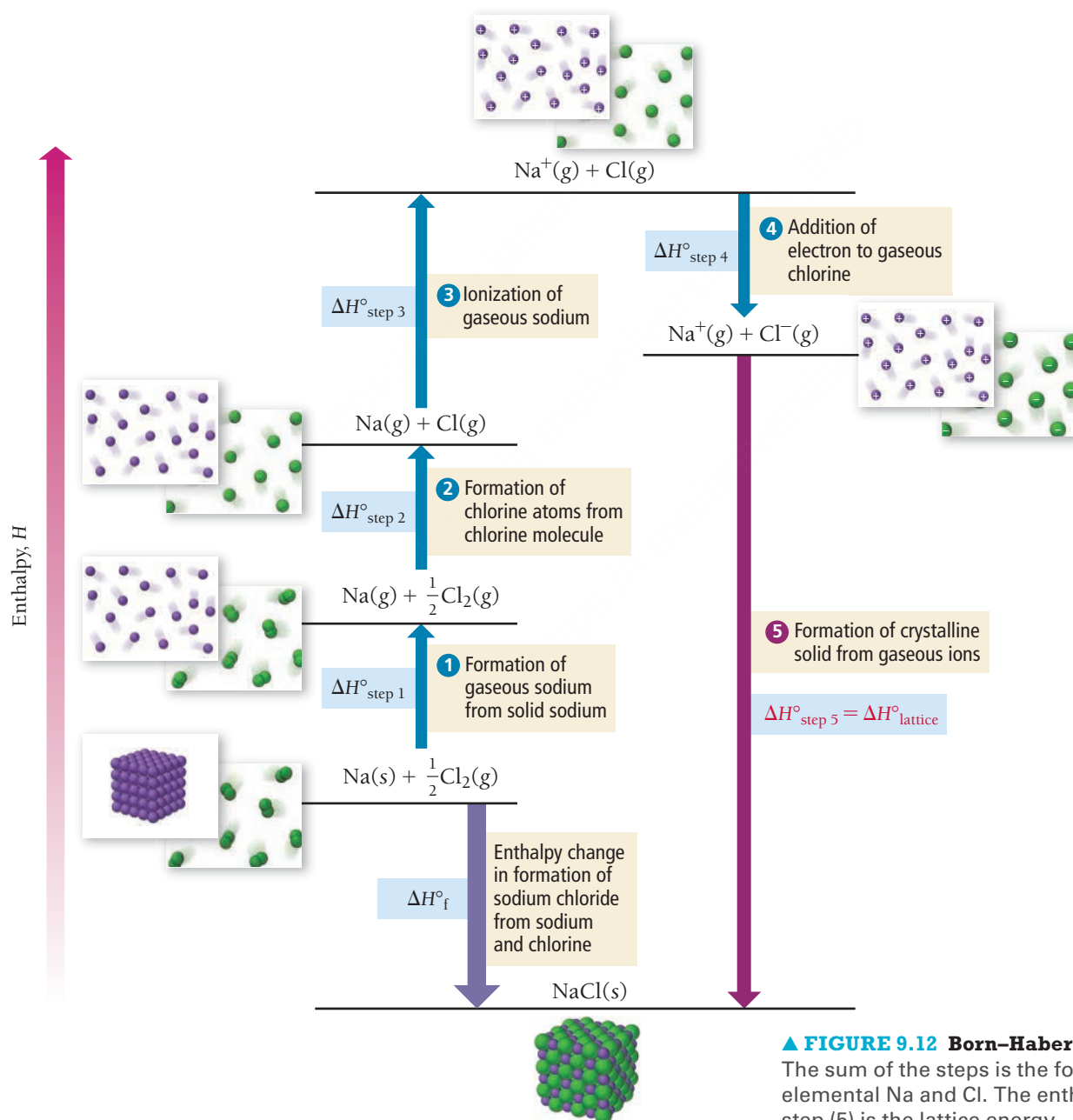
Figure 9.12 illustrates the entire Born–Haber cycle for NaCl.

Because the overall reaction obtained by summing the steps in the Born–Haber cycle is equivalent to the formation of NaCl from its constituent elements, we use Hess's law to set the overall enthalpy of formation for NaCl(s) equal to the sum of the steps in the Born–Haber cycle:

$$\Delta H_{\text{f}}^\circ = \Delta H_{\text{step 1}}^\circ + \Delta H_{\text{step 2}}^\circ + \Delta H_{\text{step 3}}^\circ + \Delta H_{\text{step 4}}^\circ + \Delta H_{\text{step 5}}^\circ$$

Lattice energy
↓

Born–Haber Cycle for Production of NaCl from Na(s) and Cl₂(g)



▲ FIGURE 9.12 Born–Haber Cycle for Sodium Chloride

The sum of the steps is the formation of NaCl from elemental Na and Cl. The enthalpy change of the last step (5) is the lattice energy.

We then solve this equation for $\Delta H_{\text{step 5}}^\circ$, which is $\Delta H_{\text{lattice}}^\circ$, and substitute the appropriate values to calculate the lattice energy:

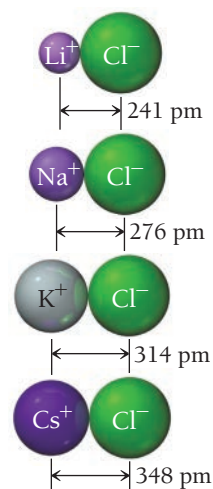
$$\begin{aligned}\Delta H_{\text{lattice}}^\circ &= \Delta H_{\text{step 5}}^\circ = \Delta H_{\text{f}}^\circ - (\Delta H_{\text{step 1}}^\circ + \Delta H_{\text{step 2}}^\circ + \Delta H_{\text{step 3}}^\circ + \Delta H_{\text{step 4}}^\circ) \\ &= -411 \text{ kJ} - (+108 \text{ kJ} + 122 \text{ kJ} + 496 \text{ kJ} - 349 \text{ kJ}) \\ &= -788 \text{ kJ}\end{aligned}$$

The value of the lattice energy is a large negative number. The formation of the crystalline NaCl lattice from sodium cations and chloride anions is highly exothermic and more than compensates for the endothermicity of the electron transfer process. In other words, the formation of ionic compounds is not exothermic because sodium “wants” to lose electrons and chlorine “wants” to gain them; rather, it is exothermic because of the large amount of heat released when sodium and chlorine ions coalesce to form a crystalline lattice.

Trends in Lattice Energies: Ion Size

Consider the lattice energies of the following alkali metal chlorides:

Metal Chloride	Lattice Energy (kJ/mol)
LiCl	−834
NaCl	−788
KCl	−701
CsCl	−657



▲ Bond lengths of the group 1A metal chlorides.

Why does the magnitude of the lattice energy decrease as we move down the column? We know from the periodic trends discussed in Chapter 3 that the ionic radius increases as we move down a column in the periodic table (see Section 3.7). We also know, from the discussion of Coulomb's law in Section 3.3, that the potential energy of oppositely charged ions becomes less negative (or more positive) as the distance between the ions increases. As the size of the alkali metal ions increases down the column, so does the distance between the metal cations and the chloride anions. The magnitude of the lattice energy of the chlorides decreases accordingly, making the formation of the chlorides less exothermic. In other words, *as the ionic radii increase as we move down the column, the ions cannot get as close to each other and therefore do not release as much energy when the lattice forms.*

Trends in Lattice Energies: Ion Charge

Consider the lattice energies of the following two compounds:

Compound	Lattice Energy (kJ/mol)
NaF	−910
CaO	−3414

Why is the magnitude of the lattice energy of CaO so much greater than the lattice energy of NaF? Na^+ has a radius of 95 pm and F^- has a radius of 136 pm, resulting in a distance between ions of 231 pm. Ca^{2+} has a radius of 99 pm and O^{2-} has a radius of 140 pm, resulting in a distance between ions of 239 pm. Even though the separation between calcium and oxygen is slightly greater (which would tend to lower the lattice energy), the lattice energy for CaO is almost four times *greater*. The explanation lies in the charges of the ions. Recall from Coulomb's law that the magnitude of the potential energy of two interacting charges depends not only on the distance between the charges, but also on the product of the charges:

$$E = \frac{1}{4\pi\epsilon_0} \frac{q_1 q_2}{r}$$

For NaF, E is proportional to $(1+)(1-) = 1-$, while for CaO, E is proportional to $(2+)(2-) = 4-$, so the relative stabilization for CaO relative to NaF is roughly four times greater, as observed in the lattice energy.

Summarizing Trends in Lattice Energies:

- Lattice energies become less exothermic (less negative) with increasing ionic radius.
- Lattice energies become more exothermic (more negative) with increasing magnitude of ionic charge.

EXAMPLE 9.14

Predicting Relative Lattice Energies

Arrange these ionic compounds in order of increasing *magnitude* of lattice energy: CaO, KBr, KCl, SrO.

SOLUTION

KBr and KCl should have lattice energies of smaller magnitude than CaO and SrO because of their lower ionic charges ($1+$, $1-$ compared to $2+$, $2-$). When you compare KBr and KCl, you expect KBr to have a lattice energy of lower magnitude due to the larger ionic radius of the bromide ion relative to the chloride ion. Between CaO and SrO, you expect SrO to have a lattice energy of lower magnitude due to the larger ionic radius of the strontium ion relative to the calcium ion.

Order of increasing *magnitude* of lattice energy:

$\text{KBr} < \text{KCl} < \text{SrO} < \text{CaO}$

Actual lattice energy values:

Compound	Lattice Energy (kJ/mol)
KBr	−671
KCl	−701
SrO	−3217
CaO	−3414

FOR PRACTICE 9.14

Arrange these ionic compounds in order of increasing magnitude of lattice energy: LiBr, KI, and CaO.

FOR MORE PRACTICE 9.14

Which compound has a higher magnitude lattice energy: NaCl or MgCl_2 ?

SELF-ASSESSMENT

QUIZ



- A chemical system produces 155 kJ of heat and does 22 kJ of work. What is ΔE for the surroundings?
 - 177 kJ
 - −177 kJ
 - 133 kJ
 - −133 kJ
- Which sample is most likely to undergo the smallest change in temperature upon the absorption of 100 kJ of heat?
 - 15 g water
 - 15 g lead
 - 50 g water
 - 50 g lead
- How much heat must a 15.0-g sample of water absorb to raise its temperature from 25.0°C to 55.0°C? (For water, $C_s = 4.18 \text{ J/g} \cdot ^\circ\text{C}$.)
 - 1.57 kJ
 - 1.88 kJ
 - 3.45 kJ
 - 107 J

4. A 12.5-g sample of granite initially at 82.0°C is immersed into 25.0 g of water that is initially at 22.0°C. What is the final temperature of both substances when they reach thermal equilibrium? (For water, $C_s = 4.18 \text{ J/g} \cdot ^\circ\text{C}$ and for granite, $C_s = 0.790 \text{ J/g} \cdot ^\circ\text{C}$.)
- 52.0°C
 - $1.55 \times 10^3^\circ\text{C}$
 - 15.7°C
 - 27.2°C
5. A cylinder with a moving piston expands from an initial volume of 0.250 L against an external pressure of 2.00 atm. The expansion does 288 J of work on the surroundings. What is the final volume of the cylinder?
- 1.42 L
 - 1.17 L
 - 144 L
 - 1.67 L
6. When a 3.80-g sample of liquid octane (C_8H_{18}) burns in a bomb calorimeter, the temperature of the calorimeter rises by 27.3°C. The heat capacity of the calorimeter, measured in a separate experiment, is 6.18 kJ/°C. What is ΔE for the combustion for octane?
- $-5.07 \times 10^3 \text{ kJ/mol}$
 - $5.07 \times 10^3 \text{ kJ/mol}$
 - $-44.4 \times 10^3 \text{ kJ/mol}$
 - $-16.7 \times 10^3 \text{ kJ/mol}$
7. Hydrogen gas reacts with oxygen to form water.
- $$2 \text{H}_2(\text{g}) + \text{O}_2(\text{g}) \longrightarrow 2 \text{H}_2\text{O}(\text{g}) \quad \Delta H = -483.5 \text{ kJ}$$
- Determine the minimum mass of hydrogen gas required to produce 226 kJ of heat.
- 8.63 g
 - 1.88 g
 - 0.942 g
 - 0.935 g
8. Manganese reacts with hydrochloric acid to produce manganese(II) chloride and hydrogen gas.



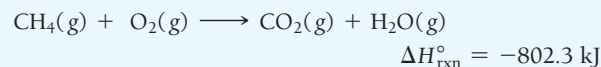
When 0.625 g Mn is combined with enough hydrochloric acid to make 100.0 mL of solution in a coffee-cup calorimeter, all of the Mn reacts, raising the temperature of the solution from 23.5°C to 28.8°C. Find ΔH_{rxn} for the reaction as written. (Assume that the specific heat capacity of the solution is 4.18 J/g°C and that the density of the solution is 1.00 g/mL.)

- 195 kJ
 - 3.54 kJ
 - 1.22 kJ
 - 2.21 kJ
9. Consider the generic reactions:
- $$\begin{array}{ll} \text{A} \longrightarrow 2 \text{B} & \Delta H_1 \\ \text{A} \longrightarrow 3 \text{C} & \Delta H_2 \end{array}$$
- What is ΔH for the related generic reaction $2 \text{B} \longrightarrow 3 \text{C}$?
- $\Delta H_1 + \Delta H_2$
 - $\Delta H_1 - \Delta H_2$
 - $\Delta H_2 - \Delta H_1$
 - $2 \times (\Delta H_1 + \Delta H_2)$

10. Use standard enthalpies of formation to determine $\Delta H_{\text{rxn}}^\circ$ for the reaction.




- 541.2 kJ
 - 2336 kJ
 - 541.2 kJ
 - 24.8 kJ
11. Two substances, A and B, which are of equal mass but at different temperatures, come into thermal contact. The specific heat capacity of substance A is twice the specific heat capacity of substance B. Which statement is true of the temperature of the two substances when they reach thermal equilibrium? (Assume no other heat loss other than the thermal transfer between the substances.)
- The final temperature of both substances is closer to the initial temperature of substance A than to the initial temperature of substance B.
 - The final temperature of both substances is closer to the initial temperature of substance B than to the initial temperature of substance A.
 - The final temperature of both substances is exactly midway between the initial temperatures of substance A and substance B.
 - The final temperature of substance B is greater than the final temperature of substance A.
12. The standard enthalpy of formation for glucose ($\text{C}_6\text{H}_{12}\text{O}_6(\text{s})$) is -1273.3 kJ/mol. What is the correct formation equation corresponding to this ΔH_f° ?
- $6 \text{C}(\text{s, graphite}) + 6 \text{H}_2\text{O}(\text{g}) \longrightarrow \text{C}_6\text{H}_{12}\text{O}_6(\text{s, glucose})$
 - $6 \text{C}(\text{s, graphite}) + 6 \text{H}_2\text{O}(\text{l}) \longrightarrow \text{C}_6\text{H}_{12}\text{O}_6(\text{s, glucose})$
 - $6 \text{C}(\text{s, graphite}) + 6 \text{H}_2(\text{l}) + 3 \text{O}_2(\text{l}) \longrightarrow \text{C}_6\text{H}_{12}\text{O}_6(\text{s, glucose})$
 - $6 \text{C}(\text{s, graphite}) + 6 \text{H}_2(\text{g}) + 3 \text{O}_2(\text{g}) \longrightarrow \text{C}_6\text{H}_{12}\text{O}_6(\text{s, glucose})$
13. Natural gas burns in air to form carbon dioxide and water, releasing heat.



What minimum mass of CH_4 is required to heat 55 g of water by 25°C? (Assume 100% heating efficiency.)

- 0.115 g
 - $2.25 \times 10^3 \text{ g}$
 - 115 g
 - 8.70 g
14. Which set of compounds is arranged in order of increasing magnitude of lattice energy?
- $\text{CsI} < \text{NaCl} < \text{MgS}$
 - $\text{NaCl} < \text{CsI} < \text{MgS}$
 - $\text{MgS} < \text{NaCl} < \text{CsI}$
 - $\text{CsI} < \text{MgS} < \text{NaCl}$
15. Use bond energies to determine ΔH_{rxn} for the reaction between ethanol and hydrogen chloride.



- 1549 kJ
- 1549 kJ
- 12 kJ
- 12 kJ

Answers: 1. a; 2. c; 3. b; 4. d; 5. d; 6. a; 7. b; 8. a; 9. c; 10. d; 11. a; 12. d; 13. a; 14. a; 15. c

CHAPTER SUMMARY

9

MasteringChemistry™ provides end-of-chapter exercises, feedback-enriched tutorial problems, animations, and interactive activities to encourage problem solving practice and deeper understanding of key concepts and topics.

REVIEW

KEY LEARNING OUTCOMES

CHAPTER OBJECTIVES	ASSESSMENT
Calculate Changes in Internal Energy from Heat and Work (9.3)	• Example 9.1 For Practice 9.1 Exercises 33–36
Find Heat from Temperature Changes (9.4)	• Example 9.2 For Practice 9.2 For More Practice 9.2 Exercises 39, 40
Determine Quantities in Thermal Energy Transfer (9.4)	• Example 9.3 For Practice 9.3 Exercises 57–62
Calculate Work from Volume Changes (9.4)	• Example 9.4 For Practice 9.4 For More Practice 9.4 Exercises 43, 44
Use Bomb Calorimetry to Calculate ΔE_{rxn} (9.5)	• Example 9.5 For Practice 9.5 For More Practice 9.5 Exercises 65, 66
Distinguish between Endothermic and Exothermic Processes (9.6)	• Example 9.6 For Practice 9.6 Exercises 49, 50
Determine Heat from ΔH and Stoichiometry (9.6)	• Example 9.7 For Practice 9.7 For More Practice 9.7 Exercises 51–56
Find ΔH_{rxn} Using Calorimetry (9.7)	• Example 9.8 For Practice 9.8 Exercises 67, 68
Find ΔH_{rxn} Using Hess's Law (9.8)	• Example 9.9 For Practice 9.9 For More Practice 9.9 Exercises 71–74
Find ΔH_{rxn} Using Bond Energies (9.9)	• Example 9.10 For Practice 9.10 For More Practice 9.10 Exercises 75–78
Find $\Delta H_{\text{rxn}}^\circ$ Using Standard Enthalpies of Formation (9.10)	• Examples 9.11, 9.12, 9.13 For Practice 9.11, 9.12, 9.13 Exercises 79–86
Predict Relative Lattice Energies (9.11)	• Example 9.14 For Practice 9.14 For More Practice 9.14 Exercises 89–92

KEY TERMS

Section 9.1

thermochemistry (368)

Section 9.2

energy (368)

work (368)

heat (q) (368)

kinetic energy (368)

thermal energy (368)

potential energy (368)

chemical energy (368)

law of conservation of energy (368)

system (369)

surroundings (369)

Section 9.3

thermodynamics (370)

first law of thermodynamics (370)

internal energy (E) (370)

state function (370)

Section 9.4

thermal equilibrium (374)

heat capacity (C) (374)specific heat capacity (C_s) (374)

molar heat capacity (374)

pressure–volume work (377)

Section 9.5

calorimetry (380)

bomb calorimeter (380)

Section 9.6enthalpy (H) (382)

endothermic reaction (382)

exothermic reaction (382)

enthalpy (heat) of reaction

(ΔH_{rxn}) (384)**Section 9.7**

coffee-cup calorimeter (385)

Section 9.8

Hess's law (387)

Section 9.10

standard state (392)

standard enthalpy change

(ΔH°) (392)standard enthalpy (or heat) of formation (ΔH_f°) (392)

standard heat of formation (393)

Section 9.11

Born–Haber cycle (398)

KEY CONCEPTS

The Nature of Energy and Thermodynamics (9.1–9.3)

- Energy, which is measured in the SI unit of joules (J), is the capacity to do work.
- Work is the result of a force acting through a distance.
- Many different kinds of energy exist, including kinetic energy, thermal energy, potential energy, and chemical energy, a type of potential energy associated with the relative positions of electrons and nuclei in atoms and molecules.
- The first law of thermodynamics states that energy can be converted from one form to another, but the total amount of energy is always conserved.
- The internal energy (E) of a system is the sum of all of its kinetic and potential energy. Internal energy is a state function, which means that it depends only on the state of the system and not on the pathway by which it got to that state.
- A chemical system exchanges energy with its surroundings through heat (the transfer of thermal energy caused by a temperature difference) or work. The total change in internal energy is the sum of these two quantities.
- The change in internal energy (ΔE) that occurs during a chemical reaction is the sum of the heat (q) exchanged and the work (w) done: $\Delta E = q + w$.

Heat and Work (9.4)

- We quantify heat with the equation $q = m \times C_s \times \Delta T$. In this expression, C_s is the specific heat capacity, the amount of heat required to change the temperature of 1 g of the substance 1°C. Compared to most substances, water has a very high heat capacity—it takes a lot of heat to change its temperature.
- The type of work most characteristic of chemical reactions is pressure–volume work, which occurs when a gas expands against an external pressure. Pressure–volume work can be quantified with the equation $w = -P\Delta V$.

Enthalpy (9.6)

- The heat evolved in a chemical reaction occurring at constant pressure is the change in enthalpy (ΔH) for the reaction. Like internal energy, enthalpy is a state function.
- An endothermic reaction has a positive enthalpy of reaction; an exothermic reaction has a negative enthalpy of reaction.
- The enthalpy of reaction can be used to determine stoichiometrically the heat evolved when a specific amount of reactant reacts.

Calorimetry (9.5, 9.7)

- Calorimetry is a method of measuring ΔE or ΔH for a reaction.
- In bomb calorimetry, the reaction is carried out under conditions of *constant volume*, so the energy is released only as heat ($\Delta E = q_v$). The temperature change of the calorimeter can therefore be used to calculate ΔE for the reaction.
- When a reaction takes place at *constant pressure*, energy may be released both as heat and as work.
- In coffee-cup calorimetry, a reaction is carried out under atmospheric pressure in a solution, so $q = \Delta H$. The temperature change of the solution is then used to calculate ΔH for the reaction.

Calculating ΔH_{rxn} (9.8–9.10)

- We can calculate the enthalpy of reaction (ΔH_{rxn}) from known thermochemical data using the following relationships: (a) when a reaction is multiplied by a factor, ΔH_{rxn} is multiplied by the same factor; (b) when a reaction is reversed, ΔH_{rxn} changes sign; and (c) if a chemical reaction can be expressed as a sum of two or more steps, ΔH_{rxn} is the sum of the ΔH values for the individual steps (Hess's law). We can use these relationships together to determine the enthalpy change of an unknown reaction from reactions with known enthalpy changes.
- We can also calculate the enthalpy of reaction (ΔH_{rxn}) from the bond energies of the reactants and products. The ΔH_{rxn} is the sum of the ΔH values for bonds broken (which are positive) plus the sum of the sum of the ΔH values for the bond formed (which are negative).
- A third way to calculate ΔH_{rxn} from known thermochemical data involves using tabulated standard enthalpies of formation for the reactants and products of the reaction. These are usually tabulated for substances in their standard states, and the enthalpy of reaction is called the standard enthalpy of reaction ($\Delta H_{\text{rxn}}^\circ$). We can obtain $\Delta H_{\text{rxn}}^\circ$ by subtracting the sum of the enthalpies of formation of the reactants multiplied by their stoichiometric coefficients from the sum of the enthalpies of formation of the products multiplied by their stoichiometric coefficients.

Lattice Energy (9.11)

- The formation of most ionic compounds is exothermic because of lattice energy, the energy released when metal cations and nonmetal anions coalesce to form the solid. The smaller the radius of the ions and the greater their charge, the more exothermic the lattice energy.

KEY EQUATIONS AND RELATIONSHIPS

Change in Internal Energy (ΔE) of a Chemical System (9.3)

$$\Delta E = E_{\text{products}} - E_{\text{reactants}}$$

Energy Flow between System and Surroundings (9.3)

$$\Delta E_{\text{system}} = -\Delta E_{\text{surroundings}}$$

Relationship between Internal Energy (ΔE), Heat (q), and Work (w) (9.3)

$$\Delta E = q + w$$

Relationship between Heat (q), Temperature (T), and Heat Capacity (C) (9.4)

$$q = C \times \Delta T$$

Relationship between Heat (q), Mass (m), Temperature (T), and Specific Heat Capacity of a Substance (C_s) (9.4)

$$q = m \times C_s \times \Delta T$$

Relationship between Work (w), Force (F), and Distance (D) (9.4)

$$w = F \times D$$

Relationship between Work (w), Pressure (P), and Change in Volume (ΔV) (9.4)

$$w = -P\Delta V$$

Change in Internal Energy (ΔE) of System at Constant Volume (9.5)

$$\Delta E = q_v$$

Heat of a Bomb Calorimeter (q_{cal}) (9.5)

$$q_{\text{cal}} = C_{\text{cal}} \times \Delta T$$

Heat Exchange between a Calorimeter and a Reaction (9.5)

$$q_{\text{cal}} = -q_{\text{rxn}}$$

Relationship between Enthalpy (ΔH), Internal Energy (ΔE), Pressure (P), and Volume (V) (9.6)

$$\Delta H = \Delta E + P\Delta V$$

$$\Delta H = q_p$$

Enthalpy Change of a Reaction (ΔH_{rxn}): Relationship of Bond Energies (9.9)

$$\Delta H_{\text{rxn}} = \Sigma(\Delta H_s \text{ bonds broken}) + \Sigma(\Delta H_s \text{ bonds formed})$$

Relationship between Enthalpy of a Reaction ($\Delta H_{\text{rxn}}^\circ$) and the Heats of Formation (ΔH_f°) (9.10)

$$\Delta H_{\text{rxn}}^\circ = \Sigma n_p \Delta H_f^\circ (\text{products}) - \Sigma n_r \Delta H_f^\circ (\text{reactants})$$

EXERCISES

REVIEW QUESTIONS

- What is thermochemistry? Why is it important?
- What is energy? What is work? List some examples of each.
- What is kinetic energy? What is potential energy? List some examples of each.
- What is the law of conservation of energy? How does it relate to energy exchanges between a thermodynamic system and its surroundings?
- A friend claims to have constructed a machine that creates electricity but requires no energy input. Explain why you should be suspicious of your friend's claim.
- What is a state function? List some examples of state functions.
- What is internal energy? Is internal energy a state function?
- If energy flows out of a chemical system and into the surroundings, what is the sign of ΔE_{system} ?
- If the internal energy of the products of a reaction is higher than the internal energy of the reactants, what is the sign of ΔE for the reaction? In which direction does energy flow?
- What is heat? Explain the difference between heat and temperature.
- How is the change in internal energy of a system related to heat and work?
- Explain how the sum of heat and work can be a state function, even though heat and work are themselves not state functions.
- What is heat capacity? Explain the difference between heat capacity and specific heat capacity.
- Explain how the high specific heat capacity of water can affect the weather in coastal regions.
- If two objects, A and B, of different temperature come into direct contact, what is the relationship between the heat lost by one object and the heat gained by the other? What is the relationship between the temperature changes of the two objects? (Assume that the two objects do not lose any heat to anything else.)
- What is pressure-volume work? How is it calculated?
- What is calorimetry? Explain the difference between a coffee-cup calorimeter and a bomb calorimeter. What is each designed to measure?
- What is the change in enthalpy (ΔH) for a chemical reaction? How is ΔH different from ΔE ?
- Explain the difference between an exothermic and an endothermic reaction. Give the sign of ΔH for each type of reaction.
- From a molecular viewpoint, where does the energy emitted in an exothermic chemical reaction come from? Why does the reaction mixture undergo an increase in temperature even though energy is emitted?
- From a molecular viewpoint, where does the energy absorbed in an endothermic chemical reaction go? Why does the reaction mixture undergo a decrease in temperature even though energy is absorbed?
- Is the change in enthalpy for a reaction an extensive property? Explain the relationship between ΔH for a reaction and the amounts of reactants and products that undergo reaction.
- Explain how the value of ΔH for a reaction changes upon:
 - multiplying the reaction by a factor
 - reversing the reaction
 Why do these relationships hold?
- What is Hess's law? Why is it useful?
- What is a standard state? What is the standard enthalpy change for a reaction?
- How can bond energies be used to estimate ΔH for a reaction?
- Explain the difference between exothermic and endothermic reactions in terms of the relative strengths of the bonds that are broken and the bonds that are formed.
- What is the standard enthalpy of formation for a compound? For a pure element in its standard state?
- How do you calculate $\Delta H_{\text{rxn}}^\circ$ from tabulated standard enthalpies of formation?
- What is lattice energy? How does lattice energy depend on ion size? On ion charge?

PROBLEMS BY TOPIC

Note: Answers to all odd-numbered Problems, numbered in blue, can be found in Appendix III. Exercises in the Problems by Topic section are paired, with each odd-numbered problem followed by a similar even-numbered problem. Exercises in the Cumulative Problems section are also paired but more loosely. Because of their nature, Challenge Problems and Conceptual Problems are unpaired.

Internal Energy, Heat, and Work

31. Which statement is true of the internal energy of a system and its surroundings during an energy exchange with a negative ΔE_{sys} ?
 - a. The internal energy of the system increases, and the internal energy of the surroundings decreases.
 - b. The internal energy of both the system and the surroundings increases.
 - c. The internal energy of both the system and the surroundings decreases.
 - d. The internal energy of the system decreases, and the internal energy of the surroundings increases.
32. During an energy exchange, a chemical system absorbs energy from its surroundings. What is the sign of ΔE_{sys} for this process? Explain.
33. Identify each energy exchange as primarily heat or work and determine the sign of ΔE (positive or negative) for the system.
 - a. Sweat evaporates from skin, cooling the skin. (The evaporating sweat is the system.)
 - b. A balloon expands against an external pressure. (The contents of the balloon are the system.)
 - c. An aqueous chemical reaction mixture is warmed with an external flame. (The reaction mixture is the system.)
34. Identify each energy exchange as primarily heat or work and determine the sign of ΔE (positive or negative) for the system.
 - a. A rolling billiard ball collides with another billiard ball. The first billiard ball (defined as the system) stops rolling after the collision.
 - b. A book is dropped to the floor. (The book is the system.)
 - c. A father pushes his daughter on a swing. (The daughter and the swing are the system.)
35. A system releases 622 kJ of heat and does 105 kJ of work on the surroundings. What is the change in internal energy of the system?
36. A system absorbs 196 kJ of heat, and the surroundings do 117 kJ of work on the system. What is the change in internal energy of the system?
37. The gas in a piston (defined as the system) warms and absorbs 655 J of heat. The expansion performs 344 J of work on the surroundings. What is the change in internal energy for the system?
38. The air in an inflated balloon (defined as the system) warms over a toaster and absorbs 115 J of heat. As it expands, it does 77 kJ of work. What is the change in internal energy for the system?

Heat, Heat Capacity, and Work

39. A person packs two identical coolers for a picnic, placing twenty-four 12-ounce soft drinks and 5 pounds of ice in each. However, the drinks put into cooler A were refrigerated for several hours before they were packed in the cooler, while the drinks put into cooler B were at room temperature. When the


picnickers open the two coolers three hours later, most of the ice in cooler A is still present, while nearly all of the ice in cooler B has melted. Explain this difference.

40. A kilogram of aluminum metal and a kilogram of water are each warmed to 75°C and placed in two identical insulated containers. One hour later, the two containers are opened, and the temperature of each substance is measured. The aluminum has cooled to 35°C, while the water has cooled only to 66°C. Explain this difference.
41. How much heat is required to warm 1.50 L of water from 25.0°C to 100.0°C? (Assume a density of 1.00 g/mL for the water.)
42. How much heat is required to warm 1.50 kg of sand from 25.0°C to 100.0°C?
43. Suppose that 25 g of each substance is initially at 27.0°C. What is the final temperature of each substance upon absorbing 2.35 kJ of heat?
 - a. gold b. silver c. aluminum d. water
44. An unknown mass of each substance, initially at 23.0°C, absorbs 1.95×10^3 J of heat. The final temperature is recorded as indicated. Find the mass of each substance.
 - a. Pyrex glass ($T_f = 55.4^\circ\text{C}$) b. sand ($T_f = 62.1^\circ\text{C}$)
 - c. ethanol ($T_f = 44.2^\circ\text{C}$) d. water ($T_f = 32.4^\circ\text{C}$)
45. How much work (in J) is required to expand the volume of a pump from 0.0 L to 2.5 L against an external pressure of 1.1 atm?
46. The average human lung expands by about 0.50 L during each breath. If this expansion occurs against an external pressure of 1.0 atm, how much work (in J) is done during the expansion?
47. The air within a piston equipped with a cylinder absorbs 565 J of heat and expands from an initial volume of 0.10 L to a final volume of 0.85 L against an external pressure of 1.0 atm. What is the change in internal energy of the air within the piston?
48. A gas is compressed from an initial volume of 5.55 L to a final volume of 1.22 L by an external pressure of 1.00 atm. During the compression the gas releases 124 J of heat. What is the change in internal energy of the gas?

Enthalpy and Thermochemical Stoichiometry

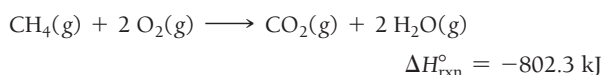
49. When 1 mol of a fuel burns at constant pressure, it produces 3452 kJ of heat and does 11 kJ of work. What are ΔE and ΔH for the combustion of the fuel?
50. The change in internal energy for the combustion of 1.0 mol of octane at a pressure of 1.0 atm is 5084.3 kJ. If the change in enthalpy is 5074.1 kJ, how much work is done during the combustion?
51. Is each process exothermic or endothermic? Indicate the sign of ΔH .
 - a. natural gas burning on a stove
 - b. isopropyl alcohol evaporating from skin
 - c. water condensing from steam
52. Is each process exothermic or endothermic? Indicate the sign of ΔH .
 - a. dry ice evaporating
 - b. a sparkler burning
 - c. the reaction that occurs in a chemical cold pack used to ice athletic injuries

53. Consider the thermochemical equation for the combustion of acetone ($\text{C}_3\text{H}_6\text{O}$), the main ingredient in nail polish remover:

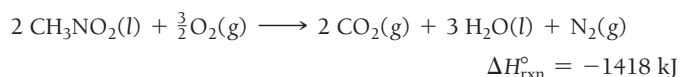


If a bottle of nail polish remover contains 177 mL of acetone, how much heat is released by its complete combustion? The density of acetone is 0.788 g/mL.

54. What mass of natural gas (CH_4) must burn to emit 267 kJ of heat?



55. Nitromethane (CH_3NO_2) burns in air to produce significant amounts of heat:



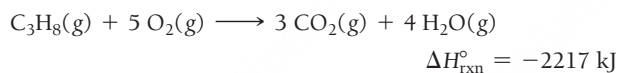
How much heat is produced by the complete reaction of 5.56 kg of nitromethane?

56. Titanium reacts with iodine to form titanium(III) iodide, emitting heat:



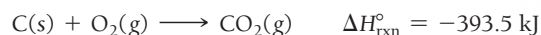
Determine the masses of titanium and iodine that react if 1.55×10^3 kJ of heat is emitted by the reaction.

57. The propane fuel (C_3H_8) used in gas barbeques burns according to a thermochemical equation:



If a pork roast must absorb 1.6×10^3 kJ to fully cook, and if only 10% of the heat produced by the barbeque is actually absorbed by the roast, what mass of CO_2 is emitted into the atmosphere during the grilling of the pork roast?

58. Charcoal is primarily carbon. Determine the mass of CO_2 produced by burning enough carbon (in the form of charcoal) to produce 5.00×10^2 kJ of heat.



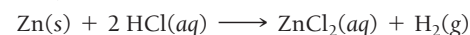
Thermal Energy Transfer

59. We submerge a silver block, initially at 58.5°C , into 100.0 g of water at 24.8°C , in an insulated container. The final temperature of the mixture upon reaching thermal equilibrium is 26.2°C . What is the mass of the silver block?
60. We submerge a 32.5-g iron rod, initially at 22.7°C , into an unknown mass of water at 63.2°C , in an insulated container. The final temperature of the mixture upon reaching thermal equilibrium is 59.5°C . What is the mass of the water?
61. We submerge a 31.1-g wafer of pure gold initially at 69.3°C into 64.2 g of water at 27.8°C in an insulated container. What is the final temperature of both substances at thermal equilibrium?
62. We submerge a 2.85-g lead weight, initially at 10.3°C , in 7.55 g of water at 52.3°C in an insulated container. What is the final temperature of both substances at thermal equilibrium?

63. Two substances, A and B, initially at different temperatures, come into contact and reach thermal equilibrium. The mass of substance A is 6.15 g, and its initial temperature is 20.5°C . The mass of substance B is 25.2 g, and its initial temperature is 52.7°C . The final temperature of both substances at thermal equilibrium is 46.7°C . If the specific heat capacity of substance B is $1.17 \text{ J/g} \cdot ^\circ\text{C}$, what is the specific heat capacity of substance A?
64. A 2.74-g sample of a substance suspected of being pure gold is warmed to 72.1°C and submerged into 15.2 g of water initially at 24.7°C . The final temperature of the mixture is 26.3°C . What is the heat capacity of the unknown substance? Could the substance be pure gold?

Calorimetry

65. Exactly 1.5 g of a fuel burns under conditions of constant pressure and then again under conditions of constant volume. In measurement A the reaction produces 25.9 kJ of heat, and in measurement B the reaction produces 23.3 kJ of heat. Which measurement (A or B) corresponds to conditions of constant pressure? Which one corresponds to conditions of constant volume? Explain.
66. In order to obtain the largest possible amount of heat from a chemical reaction in which there is a large increase in the number of moles of gas, should you carry out the reaction under conditions of constant volume or constant pressure? Explain.
67. When 0.514 g of biphenyl ($\text{C}_{12}\text{H}_{10}$) undergoes combustion in a bomb calorimeter, the temperature rises from 25.8°C to 29.4°C . Find ΔE_{rxn} for the combustion of biphenyl in kJ/mol biphenyl. The heat capacity of the bomb calorimeter, determined in a separate experiment, is $5.86 \text{ kJ/}^\circ\text{C}$.
68. Mothballs are composed primarily of the hydrocarbon naphthalene (C_{10}H_8). When 1.025 g of naphthalene burns in a bomb calorimeter, the temperature rises from 24.25°C to 32.33°C . Find ΔE_{rxn} for the combustion of naphthalene. The heat capacity of the calorimeter, determined in a separate experiment, is $5.11 \text{ kJ/}^\circ\text{C}$.
69. Zinc metal reacts with hydrochloric acid according to the balanced equation:



When 0.103 g of $\text{Zn}(\text{s})$ is combined with enough HCl to make 50.0 mL of solution in a coffee-cup calorimeter, all of the zinc reacts, raising the temperature of the solution from 22.5°C to 23.7°C . Find ΔH_{rxn} for this reaction as written. (Use 1.0 g/mL for the density of the solution and $4.18 \text{ J/g} \cdot ^\circ\text{C}$ as the specific heat capacity.)

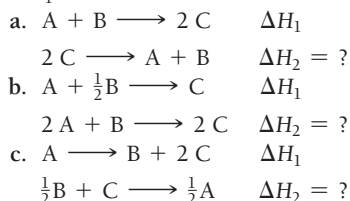
70. Instant cold packs used to ice athletic injuries on the field contain ammonium nitrate and water separated by a thin plastic divider. When the divider is broken, the ammonium nitrate dissolves according to the endothermic reaction:



In order to measure the enthalpy change for this reaction, 1.25 g of NH_4NO_3 is dissolved in enough water to make 25.0 mL of solution. The initial temperature is 25.8°C , and the final temperature (after the solid dissolves) is 21.9°C . Calculate the change in enthalpy for the reaction in kJ. (Use 1.0 g/mL as the density of the solution and $4.18 \text{ J/g} \cdot ^\circ\text{C}$ as the specific heat capacity.)

Quantitative Relationships Involving ΔH and Hess's Law

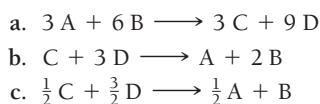
71. For each generic reaction, determine the value of ΔH_2 in terms of ΔH_1 .



72. Consider the generic reaction:



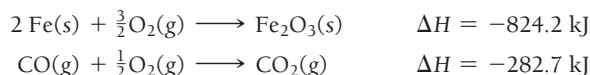
Determine the value of ΔH for each related reaction:



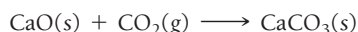
73. Calculate ΔH_{rxn} for the reaction:



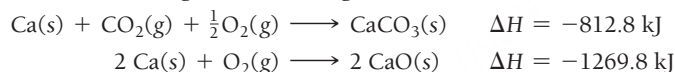
Use the following reactions and given ΔH values:



74. Calculate ΔH_{rxn} for the reaction:



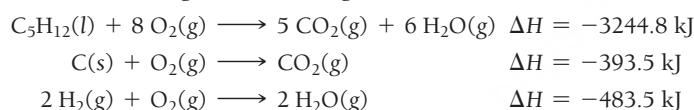
Use the following reactions and given ΔH values:



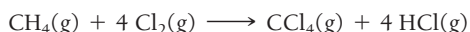
75. Calculate ΔH_{rxn} for the reaction:



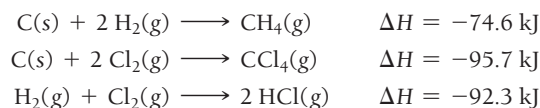
Use the following reactions and given ΔH values:



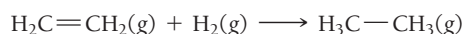
76. Calculate ΔH_{rxn} for the reaction:



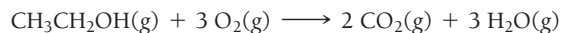
Use the following reactions and given ΔH values:

**Using Bond Energies to Calculate ΔH_{rxn}**

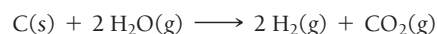
77. Hydrogenation reactions are used to add hydrogen across double bonds in hydrocarbons and other organic compounds. Use average bond energies to calculate ΔH_{rxn} for the hydrogenation reaction.



78. Ethanol is a possible fuel. Use average bond energies to calculate ΔH_{rxn} for the combustion of ethanol:



79. Hydrogen, a potential future fuel, can be produced from carbon (from coal) and steam by this reaction:



Use average bond energies to calculate ΔH_{rxn} for the reaction, and then use standard enthalpies to calculate ΔH_{rxn} . Why are the two values different and which value is more accurate?

80. Hydroxyl radicals react with and eliminate many atmospheric pollutants. However, the hydroxyl radical does not clean up everything. For example, chlorofluorocarbons—which destroy stratospheric ozone—are not attacked by the hydroxyl radical. Consider the hypothetical reaction by which the hydroxyl radical might react with a chlorofluorocarbon:



Use bond energies to explain why this reaction is improbable.

Enthalpies of Formation and ΔH

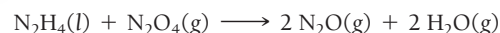
81. Write an equation for the formation of each compound from its elements in their standard states, and find ΔH_f° for each from Appendix IIB.



82. Write an equation for the formation of each compound from its elements in their standard states, and find $\Delta H_{\text{rxn}}^\circ$ for each from Appendix IIB.




83. Hydrazine (N_2H_4) is a fuel used by some spacecraft. It is normally oxidized by N_2O_4 according to the equation:



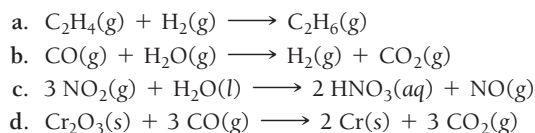
Calculate $\Delta H_{\text{rxn}}^\circ$ for this reaction using standard enthalpies of formation.

84. Pentane (C_5H_{12}) is a component of gasoline that burns according to the following balanced equation:

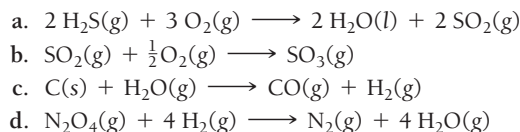


Calculate $\Delta H_{\text{rxn}}^\circ$ for this reaction using standard enthalpies of formation. (The standard enthalpy of formation of liquid pentane is -146.8 kJ/mol .)

85. Use standard enthalpies of formation to calculate $\Delta H_{\text{rxn}}^\circ$ for each reaction.



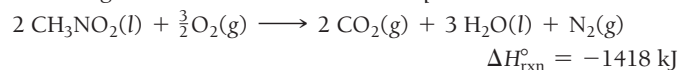
86. Use standard enthalpies of formation to calculate $\Delta H_{\text{rxn}}^\circ$ for each reaction.



87. During photosynthesis, plants use energy from sunlight to form glucose ($\text{C}_6\text{H}_{12}\text{O}_6$) and oxygen from carbon dioxide and water. Write a balanced equation for photosynthesis and calculate $\Delta H_{\text{rxn}}^\circ$.

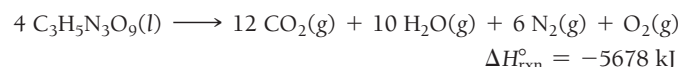
88. Ethanol can be made from the fermentation of crops and has been used as a fuel additive to gasoline. Write a balanced equation for the combustion of ethanol and calculate $\Delta H_{\text{rxn}}^\circ$.

89. Top fuel dragsters and funny cars burn nitromethane as fuel according to the balanced combustion equation:



The enthalpy of combustion for nitromethane is -709.2 kJ/mol. Calculate the standard enthalpy of formation (ΔH_f°) for nitromethane.

90. The explosive nitroglycerin ($\text{C}_3\text{H}_5\text{N}_3\text{O}_9$) decomposes rapidly upon ignition or sudden impact according to the balanced equation:



Calculate the standard enthalpy of formation (ΔH_f°) for nitroglycerin.

Lattice Energies

91. Explain the trend in the lattice energies (shown here) of the alkaline earth metal oxides.

Metal Oxide	Lattice Energy (kJ/mol)
MgO	-3795
CaO	-3414
SrO	-3217
BaO	-3029

92. Rubidium iodide has a lattice energy of -617 kJ/mol, while potassium bromide has a lattice energy of -671 kJ/mol. Why is the lattice energy of potassium bromide more exothermic than the lattice energy of rubidium iodide?
93. The lattice energy of CsF is -744 kJ/mol whereas that of BaO is -3029 kJ/mol. Explain this large difference in lattice energy.
94. Arrange these compounds in order of increasing magnitude of lattice energy: KCl, SrO, RbBr, CaO.
95. Use the Born–Haber cycle and data from Appendix IIB and Chapters 3 and 9 to calculate the lattice energy of KCl. (ΔH_{sub} for potassium is 89.0 kJ/mol.)
96. Use the Born–Haber cycle and data from Appendix IIB and Table 9.3 to calculate the lattice energy of CaO. (ΔH_{sub} for calcium is 178 kJ/mol; IE_1 and IE_2 for calcium are 590 kJ/mol and 1145 kJ/mol, respectively; EA_1 and EA_2 for O are -141 kJ/mol and 744 kJ/mol, respectively.)

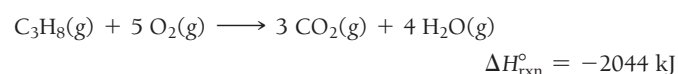
CUMULATIVE PROBLEMS

97. The kinetic energy of a rolling billiard ball is given by $\text{KE} = \frac{1}{2}mv^2$. Suppose a 0.17 -kg billiard ball is rolling down a pool table with an initial speed of 4.5 m/s. As it travels, it loses some of its energy as heat. The ball slows down to 3.8 m/s and then collides head-on with a second billiard ball of equal mass. The first billiard ball completely stops, and the second one rolls away with a velocity of 3.8 m/s. Assume the first billiard ball is the system and calculate w , q , and ΔE for the process.
98. A 100 -W light bulb is placed in a cylinder equipped with a moveable piston. The light bulb is turned on for 0.015 hour, and the assembly expands from an initial volume of 0.85 L to a final volume of 5.88 L against an external pressure of 1.0 atm. Use the wattage of the light bulb and the time it is on to calculate ΔE in joules (assume that the cylinder and light bulb assembly is the system and assume two significant figures). Calculate w and q .
99. Evaporating sweat cools the body because evaporation is an endothermic process:



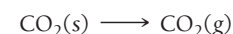
Estimate the mass of water that must evaporate from the skin to cool the body by 0.50°C . Assume a body mass of 95 kg and assume that the specific heat capacity of the body is $4.0 \text{ J/g} \cdot ^\circ\text{C}$.

100. LP gas burns according to the exothermic reaction:



What mass of LP gas is necessary to heat 1.5 L of water from room temperature (25.0°C) to boiling (100.0°C)? Assume that during heating, 15% of the heat emitted by the LP gas combustion goes to heat the water. The rest is lost as heat to the surroundings.

101. Use standard enthalpies of formation to calculate the standard change in enthalpy for the melting of ice. (The ΔH_f° for $\text{H}_2\text{O}(s)$ is -291.8 kJ/mol.) Use this value to calculate the mass of ice required to cool 355 mL of a beverage from room temperature (25.0°C) to 0.0°C . Assume that the specific heat capacity and density of the beverage are the same as those of water.
102. Dry ice is solid carbon dioxide. Instead of melting, solid carbon dioxide sublimates according to the equation:



When dry ice is added to warm water, heat from the water causes the dry ice to sublime more quickly. The evaporating carbon dioxide produces a dense fog often used to create special effects. In a simple dry ice fog machine, dry ice is added to warm water in a Styrofoam cooler. The dry ice produces fog until it evaporates away, or until the water gets too cold to sublime the dry ice quickly enough. A small Styrofoam cooler holds 15.0 L of water heated to 85°C . Use standard enthalpies of formation to calculate the change in enthalpy for dry ice sublimation, and calculate the mass of dry ice that should be added to the water so that the dry ice completely sublimates away when the water reaches 25°C . Assume no heat loss to the surroundings. (The ΔH_f° for $\text{CO}_2(s)$ is -427.4 kJ/mol.)



▲ When carbon dioxide sublimates, the gaseous CO_2 is cold enough to cause water vapor in the air to condense, forming fog.

103. A 25.5-g aluminum block is warmed to 65.4°C and plunged into an insulated beaker containing 55.2 g water initially at 22.2°C. The aluminum and the water are allowed to come to thermal equilibrium. Assuming that no heat is lost, what is the final temperature of the water and aluminum?
104. We mix 50.0 mL of ethanol (density = 0.789 g/mL) initially at 7.0°C with 50.0 mL of water (density = 1.0 g/mL) initially at 28.4°C in an insulated beaker. Assuming that no heat is lost, what is the final temperature of the mixture?
105. Palmitic acid ($\text{C}_{16}\text{H}_{32}\text{O}_2$) is a dietary fat found in beef and butter. The caloric content of palmitic acid is typical of fats in general. Write a balanced equation for the complete combustion of palmitic acid and calculate the standard enthalpy of combustion. What is the caloric content of palmitic acid in Cal/g? Do the same calculation for table sugar (sucrose, $\text{C}_{12}\text{H}_{22}\text{O}_{11}$). Which dietary substance (sugar or fat) contains more Calories per gram? The standard enthalpy of formation of palmitic acid is -208 kJ/mol , and that of sucrose is -2226.1 kJ/mol . (Use $\text{H}_2\text{O}(l)$ in the balanced chemical equations because the metabolism of these compounds produces liquid water.)
106. Hydrogen and methanol have both been proposed as alternatives to hydrocarbon fuels. Write balanced reactions for the complete combustion of hydrogen and methanol and use standard enthalpies of formation to calculate the amount of heat released per kilogram of the fuel. Which fuel contains the most energy in the least mass? How does the energy of these fuels compare to that of octane (C_8H_{18})?
107. One tablespoon of peanut butter has a mass of 16 g. It is combusted in a calorimeter whose heat capacity is $120.0 \text{ kJ/}^\circ\text{C}$. The temperature of the calorimeter rises from 22.2°C to 25.4°C . Find the food caloric content of peanut butter.
108. A mixture of 2.0 mol of $\text{H}_2(g)$ and 1.0 mol of $\text{O}_2(g)$ is placed in a sealed evacuated container made of a perfect insulating material at 25°C . The mixture is ignited with a spark, and it reacts to form liquid water. Determine the temperature of the water.
109. A 20.0-L volume of an ideal gas in a cylinder with a piston is at a pressure of 3.0 atm. Enough weight is suddenly removed from the piston to lower the external pressure to 1.5 atm. The gas then expands at constant temperature until its pressure is 1.5 atm. Find ΔE , ΔH , q , and w for this change in state.
110. When we burn 10.00 g of phosphorus in $\text{O}_2(g)$ to form $\text{P}_4\text{O}_{10}(s)$, we generate enough heat to raise the temperature of 2950 g of water from 18.0°C to 38.0°C . Calculate the enthalpy of formation of $\text{P}_4\text{O}_{10}(s)$ under these conditions.
111. The ΔH for the oxidation of S in the gas phase to $\text{SO}_3(g)$ is -204 kJ/mol , and for the oxidation of $\text{SO}_2(g)$ to $\text{SO}_3(g)$ it is 89.5 kJ/mol . Find the enthalpy of formation of $\text{SO}_2(g)$ under these conditions.
112. The ΔH_f° of $\text{TiI}_3(s)$ is -328 kJ/mol , and the ΔH° for the reaction $2 \text{ Ti}(s) + 3 \text{ I}_2(g) \longrightarrow 2 \text{ TiI}_3(s)$ is -839 kJ . Calculate the ΔH of sublimation (the state transition from solid to gas) of $\text{I}_2(s)$, which is a solid at 25°C .
113. A copper cube measuring 1.55 cm on edge and an aluminum cube measuring 1.62 cm on edge are both heated to 55.0°C and submerged in 100.0 mL of water at 22.2°C . What is the final temperature of the water when equilibrium is reached? (Assume a density of 0.998 g/mL for water.)
114. A pure gold ring and pure silver ring have a total mass of 14.9 g. We heat the two rings to 62.0°C and drop them into 15.0 mL of water at 23.5°C . When equilibrium is reached, the temperature of the water is 25.0°C . What is the mass of each ring? (Assume a density of 0.998 g/mL for water.)
115. The reaction of $\text{Fe}_2\text{O}_3(s)$ with $\text{Al}(s)$ to form $\text{Al}_2\text{O}_3(s)$ and $\text{Fe}(s)$ is called the thermite reaction and is highly exothermic. What role does lattice energy play in the exothermicity of the reaction?
116. NaCl has a lattice energy -787 kJ/mol . Consider a hypothetical salt XY. X^{3+} has the same radius as Na^+ , and Y^{3-} has the same radius as Cl^- . Estimate the lattice energy of XY.
117. If hydrogen were used as a fuel, it could be burned according to this reaction:
- $$\text{H}_2(g) + \frac{1}{2} \text{O}_2(g) \longrightarrow \text{H}_2\text{O}(g)$$
- Use average bond energies to calculate ΔH_{rxn} for this reaction and also for the combustion of methane (CH_4). Which fuel yields more energy per mole? Per gram?
118. Calculate ΔH_{rxn} for the combustion of octane (C_8H_{18}), a component of gasoline, by using average bond energies, and then calculate it using enthalpies of formation from Appendix IIB. What is the percent difference between your results? Which result would you expect to be more accurate?
119. The heat of atomization is the heat required to convert a molecule in the gas phase into its constituent atoms in the gas phase. The heat of atomization is used to calculate average bond energies. Without using any tabulated bond energies, calculate the average C—Cl bond energy from the following data: The heat of atomization of CH_4 is 1660 kJ/mol , and that of CH_2Cl_2 is 1495 kJ/mol .
120. Calculate the heat of atomization (see previous problem) of $\text{C}_2\text{H}_3\text{Cl}$, using the average bond energies in Table 9.3.

CHALLENGE PROBLEMS

121. A typical frostless refrigerator uses 655 kWh of energy per year in the form of electricity. Suppose that all of this electricity is generated at a power plant that burns coal containing 3.2% sulfur by mass and that all of the sulfur is emitted as SO_2 when the coal is burned. If all of the SO_2 goes on to react with rainwater to

form H_2SO_4 , what mass of H_2SO_4 does the annual operation of the refrigerator produce? (*Hint:* Assume that the remaining percentage of the coal is carbon and begin by calculating $\Delta H_{\text{rxn}}^\circ$ for the combustion of carbon.)

122. A large sport utility vehicle has a mass of 2.5×10^3 kg. Calculate the mass of CO_2 emitted into the atmosphere upon accelerating the SUV from 0.0 mph to 65.0 mph. Assume that the required energy comes from the combustion of octane with 30% efficiency. (Hint: Use $\text{KE} = \frac{1}{2}mv^2$ to calculate the kinetic energy required for the acceleration.)
123. Combustion of natural gas (primarily methane) occurs in most household heaters. The heat given off in this reaction is used to raise the temperature of the air in the house. Assuming that all the energy given off in the reaction goes to heating up only the air in the house, determine the mass of methane required to heat the air in a house by 10.0°C . Assume that the house dimensions are $30.0\text{ m} \times 30.0\text{ m} \times 3.0\text{ m}$; specific heat capacity of air is $30\text{ J/K} \cdot \text{mol}$; and 1.00 mol of air occupies 22.4 L for all temperatures concerned.
124. When backpacking in the wilderness, hikers often boil water to sterilize it for drinking. Suppose that you are planning a backpacking trip and will need to boil 35 L of water for your group. What volume of fuel should you bring? Assume that the fuel has an average formula of C_7H_{16} ; 15% of the heat generated from combustion goes to heat the water (the rest is lost to the surroundings); the density of the fuel is 0.78 g/mL ; the initial temperature of the water is 25.0°C ; and the standard enthalpy of formation of C_7H_{16} is -224.4 kJ/mol .
125. An ice cube of mass 9.0 g is added to a cup of coffee. The coffee's initial temperature is 90.0°C and the cup contains 120.0 g of liquid. Assume the specific heat capacity of the coffee is the same as that of water. The heat of fusion of ice (the heat associated with ice melting) is 6.0 kJ/mol . Find the temperature of the coffee after the ice melts.
126. Find ΔH , ΔE , q , and w for the freezing of water at -10.0°C . The specific heat capacity of ice is $2.04\text{ J/g} \cdot ^\circ\text{C}$ and its heat of fusion (the quantity of heat associated with melting) is -332 J/g .
127. The heat of vaporization of water at 373 K is 40.7 kJ/mol . Find q , w , ΔE , and ΔH for the evaporation of 454 g of water at this temperature at 1 atm .
128. Find ΔH for the combustion of ethanol ($\text{C}_2\text{H}_6\text{O}$) to carbon dioxide and liquid water from the following data. The heat capacity of the bomb calorimeter is 34.65 kJ/K , and the combustion of 1.765 g of ethanol raises the temperature of the calorimeter from 294.33 K to 295.84 K .
129. The main component of acid rain (H_2SO_4) forms from SO_2 , a pollutant in the atmosphere, via these steps:
- $$\text{SO}_2 + \text{OH} \cdot \longrightarrow \text{HSO}_3 \cdot$$
- $$\text{HSO}_3 \cdot + \text{O}_2 \longrightarrow \text{SO}_3 + \text{HOO} \cdot$$
- $$\text{SO}_3 + \text{H}_2\text{O} \longrightarrow \text{H}_2\text{SO}_4$$
- Draw the Lewis structure for each of the species in these steps and use bond energies and Hess's law to estimate ΔH_{rxn} for the overall process. (Use 265 kJ/mol for the $\text{S}-\text{O}$ single-bond energy.)
130. Use average bond energies together with the standard enthalpy of formation of C(g) (718.4 kJ/mol) to estimate the standard enthalpy of formation of gaseous benzene, $\text{C}_6\text{H}_6(\text{g})$. (Remember that average bond energies apply to the gas phase only.) Compare the value you obtain using average bond energies to the actual standard enthalpy of formation of gaseous benzene, 82.9 kJ/mol . What does the difference between these two values tell you about the stability of benzene?
131. The standard heat of formation of CaBr_2 is -675 kJ/mol . The first ionization energy of Ca is 590 kJ/mol , and its second ionization energy is 1145 kJ/mol . The heat of sublimation of Ca [$\text{Ca(s)} \longrightarrow \text{Ca(g)}$] is 178 kJ/mol . The bond energy of Br_2 is 193 kJ/mol , the heat of vaporization of $\text{Br}_2(\text{l})$ is 31 kJ/mol , and the electron affinity of Br is -325 kJ/mol . Calculate the lattice energy of CaBr_2 .
132. The standard heat of formation of $\text{PI}_3(\text{s})$ is -24.7 kJ/mol , and the PI bond energy in this molecule is 184 kJ/mol . The standard heat of formation of PI is 334 kJ/mol , and that of $\text{I}_2(\text{g})$ is 62 kJ/mol . The I_2 bond energy is 151 kJ/mol . Calculate the heat of sublimation of $\text{PI}_3[\text{PI}_3(\text{s}) \longrightarrow \text{PI}_3(\text{g})]$.

CONCEPTUAL PROBLEMS

133. Which statement is true of the internal energy of the system and its surroundings following a process in which $\Delta E_{\text{sys}} = +65\text{ kJ}$? Explain.
- The system and the surroundings both lose 65 kJ of energy.
 - The system and the surroundings both gain 65 kJ of energy.
 - The system loses 65 kJ of energy, and the surroundings gain 65 kJ of energy.
 - The system gains 65 kJ of energy, and the surroundings lose 65 kJ of energy.
134. Which expression describes the heat emitted in a chemical reaction when the reaction is carried out at constant pressure? Explain.
- $\Delta E - w$
 - ΔE
 - $\Delta E - q$
135. Two identical refrigerators are plugged in for the first time. Refrigerator A is empty (except for air), and refrigerator B is filled with jugs of water. The compressors of both refrigerators immediately turn on and begin cooling the interiors of the refrigerators. After two hours, the compressor of refrigerator A turns off while the compressor of refrigerator B continues to run. The next day, the compressor of refrigerator A can be heard turning on and off every few minutes, while the compressor of refrigerator B turns off and on every hour or so (and stays on longer each time). Explain these observations.
136. A 1-kg cylinder of aluminum and a 1-kg jug of water, both at room temperature, are put into a refrigerator. After one hour, the temperature of each object is measured. One of the objects is much cooler than the other. Which one is cooler and why?

137. Two substances A and B, initially at different temperatures, are thermally isolated from their surroundings and allowed to come into thermal contact. The mass of substance A is twice the mass of substance B, but the specific heat capacity of substance B is four times the specific heat capacity of substance A. Which substance will undergo a larger change in temperature?
138. When 1 mol of a gas burns at constant pressure, it produces 2418 J of heat and does 5 J of work. Determine ΔE , ΔH , q , and w for the process.
139. In an exothermic reaction, the reactants lose energy and the reaction feels hot to the touch. Explain why the reaction feels hot even though the reactants are losing energy. Where does the energy come from?
140. Which statement is true of a reaction in which ΔV is positive? Explain.
 a. $\Delta H = \Delta E$ b. $\Delta H > \Delta E$ c. $\Delta H < \Delta E$
141. Which statement is true of an endothermic reaction?
 a. Strong bonds break and weak bonds form.
 b. Weak bonds break and strong bonds form.
 c. The bonds that break and those that form are of approximately the same strength.
142. When a firecracker explodes, energy is obviously released. The compounds in the firecracker can be viewed as being “energy rich.” What does this mean? Explain the source of the energy in terms of chemical bonds.

QUESTIONS FOR GROUP WORK

Active Classroom Learning

Discuss these questions with the group and record your consensus answer.

143. Have each group member write a problem involving the transfer of heat from one material in Table 9.2 to another material in the table. Working as a group, solve each problem. The group member who wrote the problem in question may act as the group facilitator when the group is working on that problem. What do all of your problems have in common? How do they differ?
144. Classify each process as endothermic or exothermic. What is the sign of ΔH for each process? Explain your answers.
 a. gasoline burning in an engine
 b. steam condensing on a mirror
 c. water boiling in a pot
 Have each member of your group provide an additional example. Provide at least two examples of exothermic processes and two additional examples of endothermic processes.
145. A propane tank on a home barbeque contains 10.4×10^3 g of propane.
 a. Write the balanced chemical reaction for the combustion of gaseous propane (C_3H_8) to form water vapor and gaseous carbon dioxide.
 b. Use the value for ΔH_{rxn} provided in the text to calculate the total amount of heat produced when the entire contents of the tank of propane is burned.
 c. What mass of water could be warmed from 25°C to 100°C with this much heat?
146. Solid carbon—C(s, graphite), gaseous hydrogen— $H_2(g)$, and the sugar glucose— $C_6H_{12}O_6(s)$ are all burned with oxygen in a bomb calorimeter, and the amount of heat given off is determined for each process. How can these data obtained be used to determine the heat of formation of glucose? Your answer should include both chemical reactions and complete sentences.
147. Consider the decomposition of liquid hydrogen peroxide (H_2O_2) to form water and oxygen.
 a. What is the heat of formation for hydrogen peroxide?
 b. What is the heat of formation for liquid water?
 c. What is the heat of formation for gaseous oxygen? Why?
 d. Write the balanced chemical equations that correspond to the ΔH values you looked up for parts a, b, and c.
 e. Write the balanced chemical equation for the decomposition of hydrogen peroxide to form water and oxygen. (Write the equation such that the coefficient on oxygen is 1.)
 f. What is the heat of reaction for the process in part e?
 g. Draw a scale diagram of this reaction in which 1 cm = 100 kJ showing the relative energies of reactants (on the left), products (on the right), and the elements in their most stable states (in the middle). Label all the energies you know.

DATA INTERPRETATION AND ANALYSIS

148. The heating value of combustible fuels is evaluated based on the quantities known as the higher heating value (HHV) and the lower heating value (LHV). The HHV has a higher absolute value and assumes that the water formed in the combustion reaction is formed in the liquid state. The LHV has a lower absolute value and assumes that the water formed in the combustion reaction is formed in the gaseous state. The LHV is therefore the sum of the HHV (which is negative) and the heat of vaporization of water for the number of moles of water formed in the reaction (which is positive). The table on the right lists the enthalpy of combustion—which is equivalent to the HHV—for several closely related hydrocarbons.

Use the information in the table at right to answer the following questions:

- Write two balanced equations for the combustion of C_3H_8 ; one equation assuming the formation of liquid water and the other equation assuming the formation of gaseous water.
- Given that the heat of vaporization of water is 44.0 kJ/mol , what is ΔH_{rxn} for each of the reactions in part a? Which quantity is the HHV? The LLV?

- When propane is used to cook in an outdoor grill, is the amount of heat released the HHV or the LLV? What amount of heat is released upon combustion of 1.00 kg of propane in an outdoor grill?
- For each CH_2 unit added to a linear alkane, what is the average increase in the absolute value of ΔH_{comb} ?

Alkane Combustion Values

Alkane	$\Delta H_{\text{comb}} \text{ (kJ/mol)}$
$\text{CH}_4(g)$	−890
$\text{C}_2\text{H}_6(g)$	−1560
$\text{C}_3\text{H}_8(g)$	−2219
$\text{C}_4\text{H}_{10}(g)$	−2877
$\text{C}_5\text{H}_{12}(l)$	−3509
$\text{C}_6\text{H}_{14}(l)$	−4163
$\text{C}_7\text{H}_{16}(l)$	−4817
$\text{C}_8\text{H}_{18}(l)$	−5470

ANSWERS TO CONCEPTUAL CONNECTIONS

- Cc 9.1 The correct answer is (a). When ΔE_{sys} is negative, energy flows out of the system and into the surroundings. The energy increase in the surroundings must exactly match the decrease in the system.
- Cc 9.2 (a) heat, sign is positive (b) work, sign is positive (c) heat, sign is negative.
- Cc 9.3 Bring the water; it has the higher heat capacity and will therefore release more heat as it cools (because it absorbed more heat when it was heated to 38°C).
- Cc 9.4 (c) The specific heat capacity of substance B is twice that of A, but because the mass of B is half that of A, the quantity $m \times C_s$ is identical for both substances so that the final temperature is exactly midway between the two initial temperatures.
- Cc 9.5 ΔH represents only the heat exchanged; therefore $\Delta H = -2658 \text{ kJ}$. ΔE represents the heat *and work* exchanged; therefore $\Delta E = -2661 \text{ kJ}$. The signs of both ΔH and ΔE are negative because heat and work are flowing out of the system and into the surroundings. Notice that the values of ΔH and ΔE are similar in magnitude, as is the case in many chemical reactions.

- Cc 9.6 An endothermic reaction feels cold to the touch because the reaction (acting here as the system) absorbs heat from the surroundings. When you touch the vessel in which the reaction occurs, you, being part of the surroundings, lose heat to the system (the reaction), which makes you feel cold. The heat absorbed by the reaction (from your body, in this case) does not contribute to increasing its temperature, but rather becomes potential energy.
- Cc 9.7 The value of q_{rxn} with the greater magnitude (-12.5 kJ) must have come from the bomb calorimeter. Recall that $\Delta E_{\text{rxn}} = q_{\text{rxn}} + w_{\text{rxn}}$. In a bomb calorimeter, the energy change that occurs in the course of the reaction all takes the form of heat (q). In a coffee-cup calorimeter, the amount of energy released as heat may be smaller because some of the energy may be used to do work (w).
- Cc 9.8 (b) In a highly exothermic reaction, the energy required to break bonds is less than the energy released when the new bonds form, resulting in a net release of energy.

- 10.1** Supersonic Skydiving and the Risk of Decompression 415
- 10.2** A Particulate Model for Gases: Kinetic Molecular Theory 416
- 10.3** Pressure: The Result of Particle Collisions 417
- 10.4** The Simple Gas Laws: Boyle's Law, Charles's Law, and Avogadro's Law 420
- 10.5** The Ideal Gas Law 425
- 10.6** Applications of the Ideal Gas Law: Molar Volume, Density, and Molar Mass of a Gas 430

- 10.7** Mixtures of Gases and Partial Pressures 433
- 10.8** Temperature and Molecular Velocities 440
- 10.9** Mean Free Path, Diffusion, and Effusion of Gases 442
- 10.10** Gases in Chemical Reactions: Stoichiometry Revisited 444
- 10.11** Real Gases: The Effects of Size and Intermolecular Forces 447

Key Learning Outcomes 451



A pressurized suit protected Felix Baumgartner from the vacuum of space during his record-breaking skydive. Any significant damage to the suit carried the risk of uncontrolled decompression, which would likely result in Baumgartner's death.

CHAPTER

10

Gases

PEOPLE CAN SURVIVE FOR WEEKS without food, days without water, but only minutes without air. Fortunately, we live at the bottom of a vast ocean of air, held to Earth by gravity. The air around us is matter in the gaseous state. The behavior of gases can be explained (and in fact predicted) by a model called the *kinetic molecular theory*. The core of this model is that *gases are composed of particles in constant motion*. Here, we again see the main theme of this book played out: *Matter is particulate, and its behavior can be understood in terms of particles*. In this chapter, we first look at this model for gases. We then turn to the observations and the laws that confirm the model.

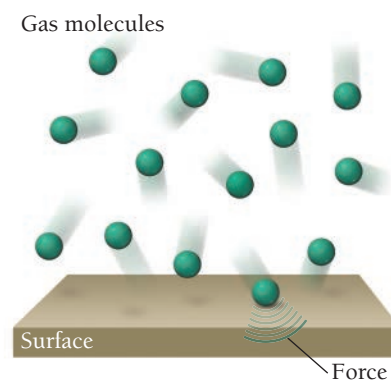
“So many of the properties of matter, especially when in the gaseous form, can be deduced from the hypothesis that their minute parts are in rapid motion, the velocity increasing with the temperature, that the precise nature of this motion becomes a subject of rational curiosity.”

—James Clerk Maxwell (1831–1879)

10.1 Supersonic Skydiving and the Risk of Decompression

On October 14, 2012, just after midday in New Mexico, Austrian daredevil Felix Baumgartner stepped into the dark void of space 24 mi (38.6 km) above Earth’s surface. Baumgartner’s 20-minute journey back to the desert floor broke the sound barrier and shattered the previous skydiving record of 19.5 mi. (31.4 km).

When Baumgartner stepped into space, he was protected from the surrounding vacuum by a pressurized suit. The suit contained air at a pressure similar to that found on the surface of Earth. **Pressure** is the force exerted per unit area by gas particles as they strike the surfaces around them (**Figure 10.1** ▶). Just as a ball exerts a force when it bounces against a wall, so a gaseous atom or molecule exerts a force when it collides with a surface. The result of many of these collisions is pressure—the constant force on the surfaces exposed to any gas. The total



▶ **FIGURE 10.1 Gas Pressure** Pressure is the force per unit area exerted by gas molecules colliding with the surfaces around them.

pressure exerted by a gas depends on several factors, including the concentration of gas particles in the sample; the lower the concentration, the lower the pressure. At 24 mi. (38.6 km) above Earth's surface, the concentration of gas particles is much lower than at sea level; consequently, the pressure is very low. Without the pressurized suit, Baumgartner could not survive the space-like conditions.

One of the risks that Baumgartner faced during his dive was uncontrolled decompression. Any significant damage to the suit would cause the air within the suit to escape, resulting in a large pressure drop. While the effects of a large pressure drop are sometimes exaggerated—for example, one urban myth erroneously claims that a person can explode—they are nonetheless lethal. For example, if a pressure drop had occurred fast enough, a large pressure difference would have quickly developed between the air in Baumgartner's lungs and the surrounding vacuum. The pressure difference would have caused his lungs to expand too much, resulting in severe lung damage. Fortunately, Baumgartner's suit worked just as it was designed to do, and he plunged safely back to Earth without incident.



KEY CONCEPT VIDEO
Kinetic Molecular Theory

Kinetic Molecular Theory




▲ **FIGURE 10.2 A Model for Gas Behavior** In the kinetic molecular theory of gases, a gas sample is modeled as a collection of particles in constant straight-line motion. The size of each particle is negligibly small, and their collisions are elastic.

10.2 A Particulate Model for Gases: Kinetic Molecular Theory

We can build a model (or theory) for a gas based on one of the core themes of this book—that matter is particulate. The model is called the **kinetic molecular theory of gases**. According to the kinetic molecular theory, a gas is a collection of particles (either molecules or atoms, depending on the gas) in constant motion (**Figure 10.2** ◀). A single particle moves in a straight line until it collides with another particle (or with the wall of the container). The theory has three basic postulates (or assumptions):

1. **The size of a particle is negligibly small.** Kinetic molecular theory assumes that the gas particles themselves occupy no volume, even though they have mass. This postulate is justified because, under normal pressures, the space between atoms or molecules in a gas is very large compared to the size of the atoms or molecule themselves. For example, in a sample of argon gas under normal atmospheric conditions, atoms occupy only about 0.01% of the volume, and the average distance from one argon atom to another is 3.3 nm. In comparison, the atomic radius of argon is 97 pm (0.097 nm). If an argon atom were the size of a golf ball, its nearest neighbor would be, on average, just over 4 ft away.
2. **The average kinetic energy of a particle is proportional to the temperature in kelvins.** The motion of atoms or molecules in a gas is due to thermal energy, which distributes itself among the particles in the gas. At any given moment, some particles are moving faster than others—there is a distribution of velocities—but the higher the temperature, the faster the overall motion, and the greater the average kinetic energy. Notice that *kinetic energy* ($\frac{1}{2}mv^2$)—not *velocity*—is proportional to temperature. The atoms in a sample of helium and a sample of argon at the same temperature have the same average *kinetic energy*, but not the same average *velocity*. Because the helium atoms are lighter, they must move faster to have the same kinetic energy as argon atoms.
3. **The collision of one particle with another (or with the walls of its container) is completely elastic.** This means that when two particles collide, they may *exchange energy*, but there is no overall *loss of energy*. Any kinetic energy lost by one particle is completely gained by the other. In other words, the particles have no “stickiness,” and they are not deformed by the collision. An encounter between two particles in kinetic molecular theory is more like the collision between two billiard balls than the collision between two lumps of clay (**Figure 10.3** ▼). Between collisions, the particles do not exert any forces on one another.

► **FIGURE 10.3 Elastic versus Inelastic Collisions** When two billiard balls collide, the collision is elastic—the total kinetic energy of the colliding bodies is the same before and after the collision. When two lumps of clay collide, the collision is inelastic—the kinetic energy of the colliding bodies dissipates in the form of heat during the collision.



Kinetic Molecular Theory

10.1

Cc

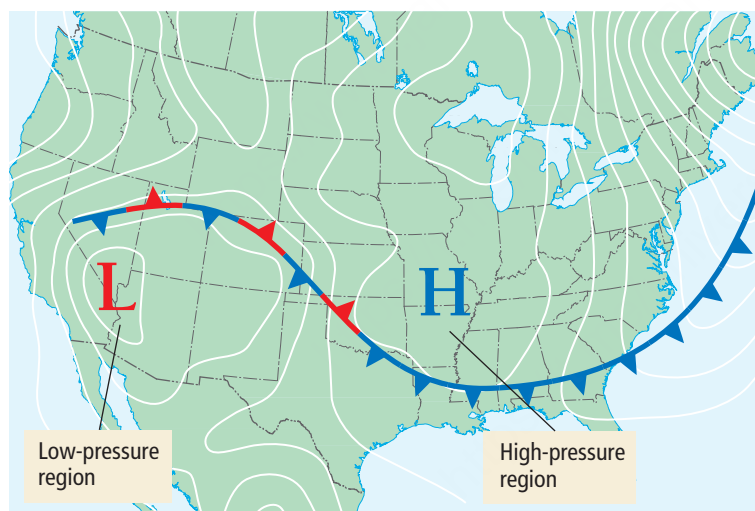
Conceptual
Connection

Draw a depiction of a gas sample containing equal molar amounts of argon and xenon as described by kinetic molecular theory. Use red dots to represent argon atoms and blue dots to represent xenon atoms. Draw each atom with a “tail” that represents its velocity relative to the others in the mixture.

10.3 Pressure: The Result of Particle Collisions

As we just discussed, particles in a gas collide with each other and with the surfaces around them. Each collision exerts only a small force, but when the forces of the many particles are summed, they quickly add up. The result of the constant collisions between the atoms or molecules in a gas and the surfaces around them is pressure. Because of pressure, we can drink from straws, inflate basketballs, and breathe. Variation in pressure in Earth’s atmosphere creates wind, and changes in pressure help us to predict weather (**Figure 10.4** ▼). Pressure is all around us and inside of us. The pressure that a gas sample exerts is the *force* that results from the collisions of gas particles divided by the *area* of the surface with which they collide:

$$\text{pressure} = \frac{\text{force}}{\text{area}} = \frac{F}{A} \quad [10.1]$$

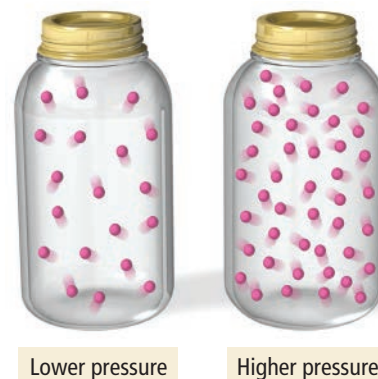


◀ **FIGURE 10.4 Pressure and Weather** Pressure variations in Earth’s atmosphere create wind and weather. The H in this map indicates a region of high pressure, usually associated with clear weather. The L indicates a region of low pressure, often associated with unstable weather.

The pressure exerted by a gas sample, therefore, depends on the number of gas particles in a given volume—the fewer the gas particles, the lower the force per unit area and the lower the pressure (**Figure 10.5** ►). Because the number of gas particles in a given volume generally decreases with increasing altitude, *pressure decreases with increasing altitude*. Above 30,000 ft (about 5.6 mi or 9 km), for example, where most commercial airplanes fly, the pressure is so low that a person could pass out due to a lack of oxygen. For this reason, airplane cabins are artificially pressurized. At 24 mi, the altitude from which Baumgartner jumped, the pressure is less than 1% of the pressure at sea level.

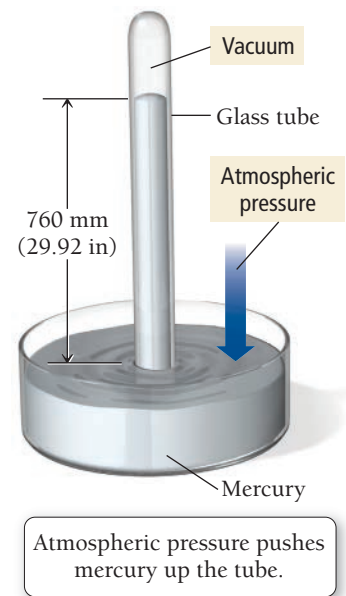
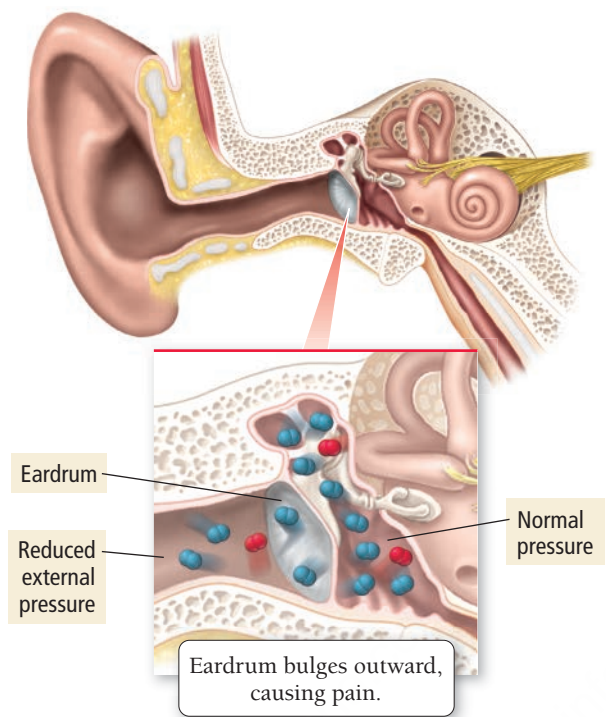
You may sometimes feel the effect of a drop in pressure as a brief pain in your ears. This pain arises within the air-containing cavities in your ear (**Figure 10.6** ► on the next page). When you ascend in a plane or hike up a mountain, the external pressure (the pressure that surrounds you) drops, while the pressure within your ear cavities (the internal pressure) remains the same. This creates an imbalance—the greater internal pressure forces your eardrum to bulge outward, causing pain. With time, and with the help of a yawn or two, the excess air within your ear’s cavities escapes, equalizing the internal and external pressure and relieving the pain.

Pressure and Density



▲ **FIGURE 10.5 Pressure and Particle Density**

► **FIGURE 10.6 Pressure Imbalance**
The discomfort you may feel in your ears upon ascending a mountain is caused by a pressure imbalance between the cavities in your ears and the outside air.



▲ **FIGURE 10.7 The Mercury Barometer** Average atmospheric pressure at sea level can support a column of mercury 760 mm in height.

Pressure Units

We measure pressure in several different units. A common unit of pressure, the **millimeter of mercury (mmHg)**, originates from how pressure is measured with a **barometer (Figure 10.7 ▲)**. A barometer is an evacuated glass tube, the tip of which is submerged in a pool of mercury. Atmospheric pressure on the liquid mercury’s surface forces the mercury upward into the evacuated tube. Because mercury is so dense (13.5 times more dense than water), atmospheric pressure can support a column of Hg that is only about 0.760 m or 760 mm (about 30 in) tall. By contrast, atmospheric pressure can support a column of water that is about 10.3 m tall (about 405 in). This makes a column of mercury a convenient way to measure pressure.

In a barometer, when the atmospheric pressure rises, the height of the mercury column rises as well. Similarly, when atmospheric pressure falls, the height of the mercury column falls. The unit *millimeter of mercury* is often called a **torr**, after the Italian physicist Evangelista Torricelli (1608–1647) who invented the barometer.

1 mmHg = 1 torr

A second unit of pressure is the **atmosphere (atm)**, the average pressure at sea level. One atmosphere of pressure pushes a column of mercury to a height of 760 mm; 1 atm and 760 mmHg are equal:

1 atm = 760 mmHg

A fully inflated mountain bike tire has a pressure of about 6 atm, and the pressure at the top of Mount Everest is about 0.31 atm.

The SI unit of pressure is the **pascal (Pa)**, defined as 1 newton (N) per square meter:

1 Pa = 1 N/m²

The pascal is a much smaller unit of pressure than the atmosphere:

1 atm = 101,325 Pa

Other common units of pressure include the bar, inches of mercury (in Hg), and pounds per square inch (psi):

1 atm = 1.013 bar 1 atm = 29.92 in Hg 1 atm = 14.7 psi

Table 10.1 summarizes these units.

TABLE 10.1 Common Units of Pressure

Unit	Abbreviation	Average Air Pressure at Sea Level
Pascal (1 N/m ²)	Pa	101,325 Pa
Pounds per square inch	psi	14.7 psi
Torr (1 mmHg)	torr	760 torr (exact)
Inches of mercury	in Hg	29.92 in Hg
Bar	bar	1.013 bar
Atmosphere	atm	1.00 atm

EXAMPLE 10.1**Converting between Pressure Units**

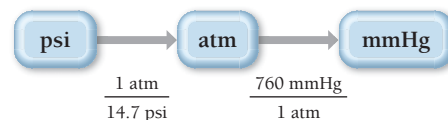
A cyclist inflates her high-performance road bicycle tire to a total pressure of 132 psi. What is this pressure in mmHg?

SORT The problem gives a pressure in psi and asks you to convert the units to mmHg.

GIVEN: 132 psi

FIND: mmHg

STRATEGIZE Table 10.1 does not have a direct conversion factor between psi and mmHg, but it does provide relationships between both of these units and atmospheres, so you can convert to atm as an intermediate step.

CONCEPTUAL PLAN**RELATIONSHIPS USED**

$$1 \text{ atm} = 14.7 \text{ psi}$$

$$760 \text{ mmHg} = 1 \text{ atm (both from Table 10.1)}$$

SOLVE Follow the conceptual plan to solve the problem. Begin with 132 psi and use the conversion factors to arrive at the pressure in mmHg.

SOLUTION

$$132 \text{ psi} \times \frac{1 \text{ atm}}{14.7 \text{ psi}} \times \frac{760 \text{ mmHg}}{1 \text{ atm}} = 6.82 \times 10^3 \text{ mmHg}$$

CHECK The units of the answer are correct. The magnitude of the answer, $6.82 \times 10^3 \text{ mmHg}$, is greater than the given pressure in psi. This is reasonable because mmHg is a much smaller unit than psi.

FOR PRACTICE 10.1

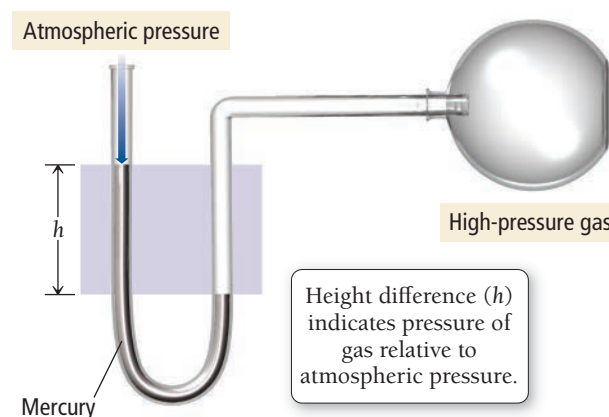
Your local weather report announces that the barometric pressure is 30.44 in Hg. Convert this pressure to psi.

FOR MORE PRACTICE 10.1

Convert a pressure of 23.8 in Hg to kPa.

The Manometer: A Way to Measure Pressure in the Laboratory

We can measure the pressure of a gas sample in the laboratory with a **manometer**. A manometer is a U-shaped tube containing a dense liquid, usually mercury. In a manometer such as the one shown in **Figure 10.8**, one end of the tube is open to atmospheric pressure and the other is attached to a flask containing a gas sample. If the pressure of the gas sample is exactly equal to atmospheric pressure, then the mercury levels on both sides of the tube are the same. If the pressure of the sample is *greater than* atmospheric pressure, the mercury level on the left side of the tube is *higher than* the level on the right (which is the case illustrated in Figure 10.8). If the pressure of the sample is *less than* atmospheric pressure, the mercury level on the left side is *lower than* the level on the right. This type of manometer always measures the pressure of the gas sample relative to atmospheric pressure. The difference in height between the two levels (h in Figure 10.8) is equal to the difference between the sample's pressure and atmospheric pressure. To accurately calculate the absolute pressure of the sample, we also need a barometer to measure atmospheric pressure (which can vary from day to day).



▲ FIGURE 10.8 The Manometer A manometer measures the pressure exerted by a sample of gas.



10.4 The Simple Gas Laws: Boyle's Law, Charles's Law, and Avogadro's Law

In this section, we broaden our discussion of gases to include the four basic properties of a gas sample: pressure (P), volume (V), temperature (T), and amount in moles (n). These properties are interrelated—when one changes, it affects the others. The *simple gas laws* describe the relationships between pairs of these properties. For example, one simple gas law describes how *volume* varies with *pressure* at constant temperature and amount of gas; another law describes how volume varies with *temperature* at constant pressure and amount of gas.

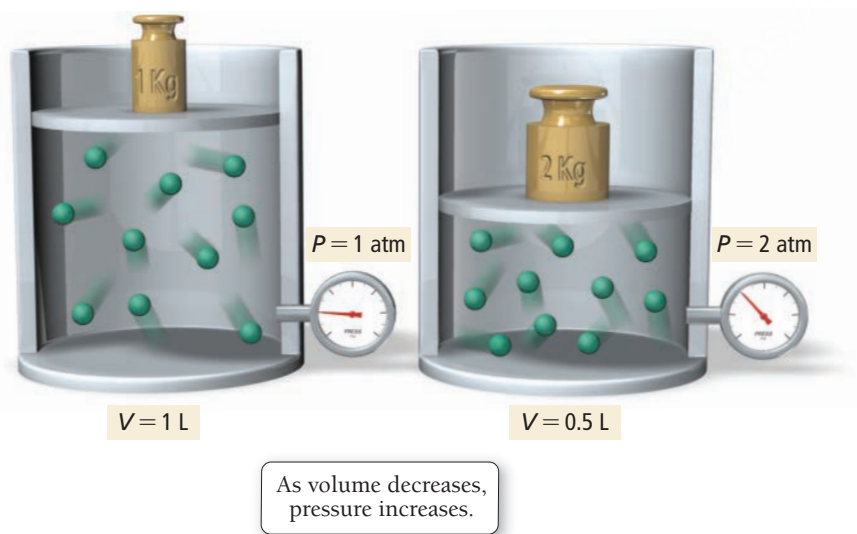
Boyle's Law: Volume and Pressure

Boyle's law relates the volume of a sample of gas to its pressure *at constant temperature*. According to kinetic molecular theory, if we decrease the volume of a gas, we force the gas particles to occupy a smaller space. As long as the temperature remains constant, the number of collisions with the surrounding surfaces (per unit surface area) must necessarily increase, resulting in a greater pressure as shown in **Figure 10.9** ▼. In other words, kinetic molecular theory predicts an inverse relationship between the pressure of a gas and its volume.

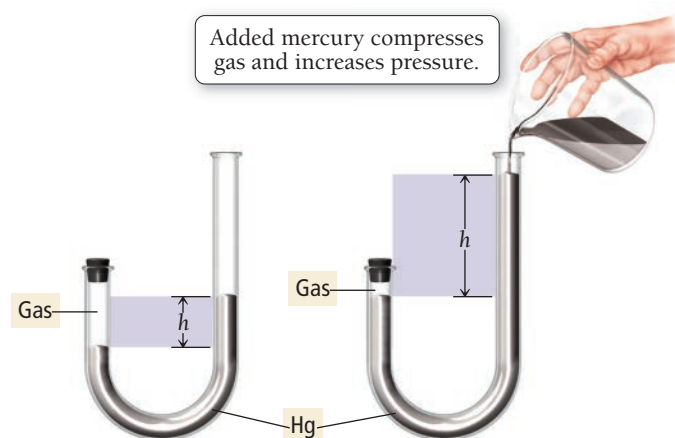
In the early 1660s, the pioneering English scientist Robert Boyle (1627–1691) and his assistant Robert Hooke (1635–1703) used a J-tube (**Figure 10.10** ▼) to measure the volume of a sample of gas at different pressures. They trapped a sample of air in the J-tube and added mercury to increase the pressure on the gas. Boyle and Hooke observed the *inverse relationship* between volume and pressure predicted by kinetic molecular theory as illustrated in **Figure 10.11** ►. This relationship is now known as **Boyle's law**:

$$\text{Boyle's law: } V \propto \frac{1}{P} \text{ (constant } T \text{ and } n\text{)}$$

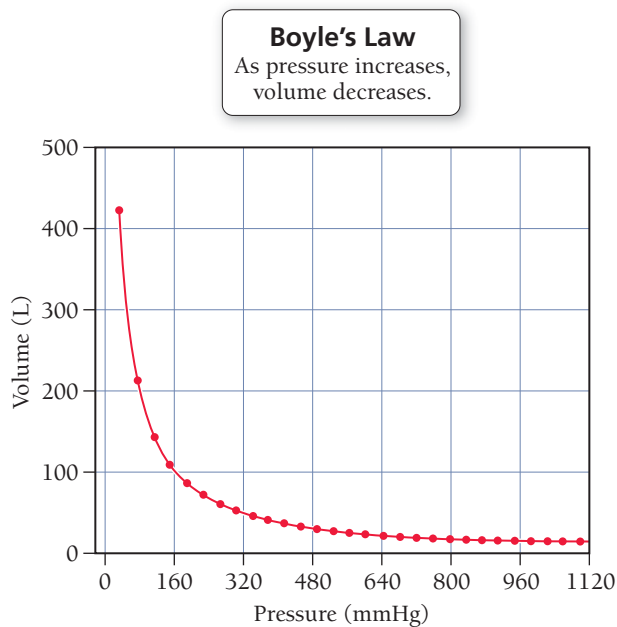
Scuba divers learn about Boyle's law during certification because it explains why a diver should never ascend toward the surface without continuous breathing. For every 10 m of depth that a diver descends in water, she experiences an additional 1 atm of pressure due to the weight of the water above



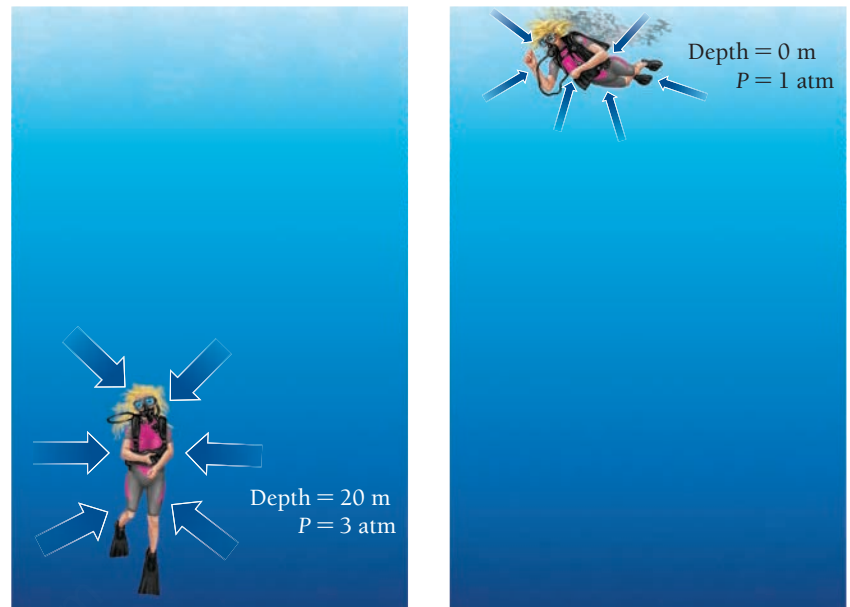
▲ **FIGURE 10.9 Volume and Pressure** As the volume of a gas sample decreases, gas molecules collide with surrounding surfaces more frequently, resulting in greater pressure.



▲ **FIGURE 10.10 The J-Tube** In a J-tube, a column of mercury (Hg) traps a sample of gas. We can increase the pressure on the gas by increasing the height (h) of mercury in the column.



▲ FIGURE 10.11 Volume versus Pressure A plot of the volume of a gas sample—as measured in a J-tube—versus pressure at constant temperature and amount of gas. The plot shows that volume and pressure are inversely related.



▲ FIGURE 10.12 Increase in Pressure with Depth For every 10 m of depth, a diver experiences approximately one additional atmosphere of pressure due to the weight of the surrounding water. At 20 m, for example, the diver experiences approximately 3 atm of pressure (1 atm of normal atmospheric pressure plus an additional 2 atm due to the weight of the water).

her (**Figure 10.12 ▲**). The pressure regulator used in scuba diving delivers air into the diver's lungs at a pressure that matches the external pressure; otherwise the diver could not inhale the air. For example, when a diver is 20 m below the surface, the regulator delivers air at a pressure of 3 atm to match the 3 atm of pressure around the diver (1 atm due to normal atmospheric pressure and 2 additional atmospheres due to the weight of the water at 20 m).

Suppose that a diver inhaled a lungful of air at a pressure of 3 atm and swam quickly to the surface (where the pressure is 1 atm) while holding her breath. What would happen to the volume of air in her lungs? The pressure decreases by a factor of 3 so that the volume of the air in her lungs increases by a factor of 3—a dangerous situation similar to that of the uncontrolled decompression discussed in Section 10.1. For the scuba diver, the volume increase would prevent her from holding her breath all the way to the surface—the air would force itself out of her mouth, but probably not before the expanded air damaged her lungs, possibly killing her. Consequently, the most important rule in diving is *never hold your breath*. To avoid such catastrophic results, divers must ascend slowly and breathe continuously, allowing the regulator to bring the air pressure in their lungs back to 1 atm by the time they reach the surface.

We can use Boyle's law to calculate the volume of a gas following a pressure change or the pressure of a gas following a volume change *as long as the temperature and the amount of gas remain constant*. For these types of calculations, we write Boyle's law in a slightly different way:

$$\text{Since } V \propto \frac{1}{P}, \text{ then } V = (\text{constant}) \times \frac{1}{P} \text{ or } V = \frac{\text{constant}}{P}$$

If we multiply both sides by P , we get:

$$PV = \text{constant}$$

This relationship indicates that if the pressure increases, the volume decreases, but the product $P \times V$ always equals the same constant. For two different sets of conditions, we can say that:

$$P_1V_1 = \text{constant} = P_2V_2$$

or

$$P_1V_1 = P_2V_2 \quad [10.2]$$

where P_1 and V_1 are the initial pressure and volume of the gas, and P_2 and V_2 are the final volume and pressure.

Boyle's law assumes constant temperature and constant amount of gas.

If two quantities are proportional, then one is equal to the other multiplied by a constant.

EXAMPLE 10.2

Boyle's Law

As you breathe, you inhale by increasing your lung volume. A woman has an initial lung volume of 2.75 L, which is filled with air at an atmospheric pressure of 1.02 atm. If she increases her lung volume to 3.25 L without inhaling any additional air, what is the pressure in her lungs?

To solve the problem, first solve Boyle's law (Equation 10.2) for P_2 and then substitute the given quantities to calculate P_2 .

SOLUTION

$$\begin{aligned} P_1 V_1 &= P_2 V_2 \\ P_2 &= \frac{V_1}{V_2} P_1 \\ &= \frac{2.75 \text{ L}}{3.25 \text{ L}} 1.02 \text{ atm} \\ &= 0.863 \text{ atm} \end{aligned}$$

FOR PRACTICE 10.2

A snorkeler takes a syringe filled with 16 mL of air from the surface, where the pressure is 1.0 atm, to an unknown depth. The volume of the air in the syringe at this depth is 7.5 mL. What is the pressure at this depth? If the pressure increases by 1 atm for every additional 10 m of depth, how deep is the snorkeler?

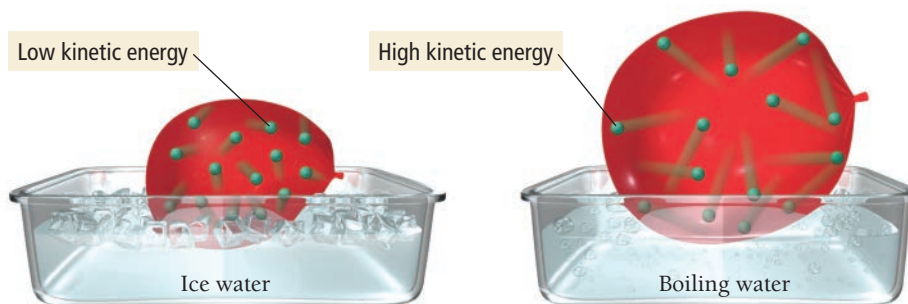
Charles's Law: Volume and Temperature

Charles's law relates the volume of a gas to its temperature *at constant pressure*. According to kinetic molecular theory, when we increase the temperature of a gas, the average kinetic energy, and therefore the average speed, of the particles increases. The faster moving particles collectively occupy more space, resulting in a greater volume, as shown in **Figure 10.13** ▼.

Figure 10.14 ► shows the results of several measurements of the volume of a gas as a function of temperature at constant pressure. From the plot, we can see the relationship predicted by kinetic molecular theory: the volume of a gas increases with increasing temperature. Closer examination of the plot reveals that volume and temperature are *linearly related*. If two variables are linearly related, plotting one against the other produces a straight line.

Another interesting feature emerges if we extend or *extrapolate* the line in the plot in Figure 10.14 backwards from the lowest measured temperature. The dotted extrapolated line shows that the gas should have a zero volume at -273.15°C . A temperature of -273.15°C corresponds to 0 K (zero on the Kelvin scale), the coldest possible temperature (see Chapter E). The extrapolated line indicates that below -273.15°C , the gas would have a negative volume, which is physically impossible. For this reason, we refer to 0 K as *absolute zero*—colder temperatures do not exist.

Volume versus Temperature



► **FIGURE 10.13** **Volume of a Gas as a Function of Temperature** If we move a balloon from an ice water bath to a boiling water bath, its volume expands as the gas particles within the balloon move faster (due to the increased temperature) and collectively occupy more space.

As temperature increases,
volume increases.

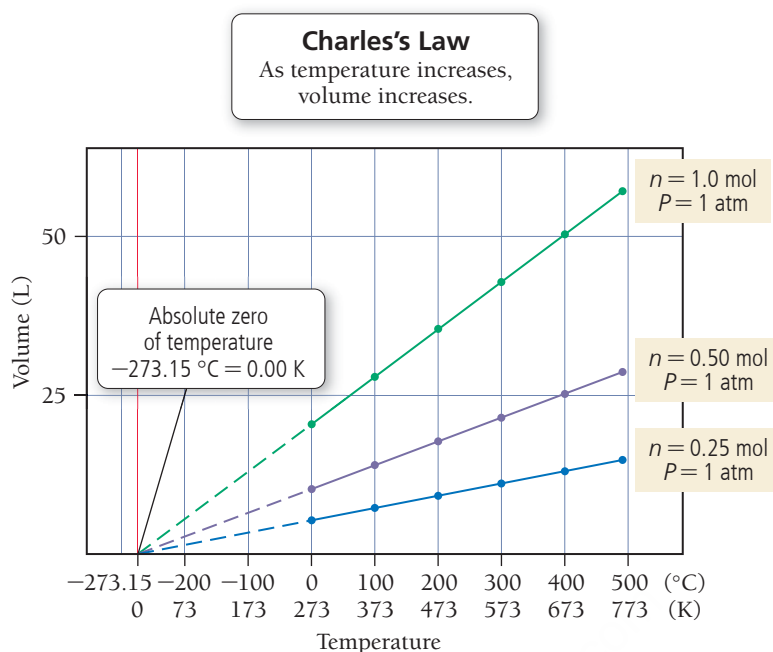


FIGURE 10.14 Volume versus Temperature The volume of a fixed amount of gas at a constant pressure increases linearly with increasing temperature in kelvins. (The dotted extrapolated lines cannot be measured experimentally because all gases condense into liquids before -273.15°C is reached.)

The first person to carefully quantify the relationship between the volume of a gas and its temperature was J. A. C. Charles (1746–1823), a French mathematician and physicist. Charles was interested in gases and was among the first people to ascend in a hydrogen-filled balloon. The direct proportionality between volume and temperature is named **Charles's law** after him:

$$\text{Charles's law: } V \propto T \quad (\text{constant } P \text{ and } n)$$

Charles's law explains why the second floor of a house is usually warmer than the ground floor. According to Charles's law, when air is heated, its volume increases, resulting in a lower density. The warm, less dense air tends to rise in a room filled with colder, denser air. Similarly, Charles's law explains why a hot-air balloon can take flight. The gas that fills a hot-air balloon is warmed with a burner, increasing its volume and lowering its density, and causing it to float in the colder, denser surrounding air.

We can experience Charles's law directly by holding a partially inflated balloon over a warm toaster. As the air in the balloon warms, we can feel the balloon expanding. Alternatively, we can put an inflated balloon into liquid nitrogen and watch it become smaller as it cools.

We can use Charles's law to calculate the volume of a gas following a temperature change or the temperature of a gas following a volume change *as long as the pressure and the amount of gas are constant*. For these calculations, we rearrange Charles's law as follows:

$$\text{Since } V \propto T, \text{ then } V = \text{constant} \times T$$

If we divide both sides by T , we get:

$$V/T = \text{constant}$$

If the temperature increases, the volume increases in direct proportion so that the quotient, V/T , is always equal to the same constant. So, for two different measurements, we can say that:

$$V_1/T_1 = \text{constant} = V_2/T_2$$

or

$$\frac{V_1}{T_1} = \frac{V_2}{T_2} \quad [10.3]$$

where V_1 and T_1 are the initial volume and temperature of the gas and V_2 and T_2 are the final volume and temperature. *We must always express the temperatures in kelvins (K)*, because, as shown in Figure 10.14, the volume of a gas is directly proportional to its absolute temperature, not its temperature in $^\circ\text{C}$. For example, doubling the temperature of a gas sample from 1°C to 2°C does not double its volume, but doubling the temperature from 200 K to 400 K does.

Charles's law assumes constant pressure and constant amount of gas.



▲ A hot-air balloon floats because the hot air within the balloon is less dense than the surrounding cold air.

EXAMPLE 10.3

Charles’s Law

A sample of gas has a volume of 2.80 L at an unknown temperature. When you submerge the sample in ice water at $T = 0.00^{\circ}\text{C}$, its volume decreases to 2.57 L. What was its initial temperature (in K and in $^{\circ}\text{C}$)?

To solve the problem, first solve Charles’s law for T_1 .	SOLUTION $\frac{V_1}{T_1} = \frac{V_2}{T_2}$ $T_1 = \frac{V_1}{V_2}T_2$
Before you substitute in the numerical values to calculate T_1 , convert the temperature to kelvins (K). <i>Remember, you must always work gas law problems with Kelvin temperatures.</i>	$T_2(\text{K}) = 0.00 + 273.15 = 273.15 \text{ K}$
Substitute T_2 and the other given quantities to calculate T_1 .	$\begin{aligned} T_1 &= \frac{V_1}{V_2}T_2 \\ &= \frac{2.80 \text{ L}}{2.57 \text{ L}}273.15 \text{ K} \\ &= 297.6 \text{ K} \end{aligned}$
Calculate T_1 in $^{\circ}\text{C}$ by subtracting 273.15 from the value in kelvins.	$T_1(^{\circ}\text{C}) = 297.6 + 273.15 = 24^{\circ}\text{C}$

FOR PRACTICE 10.3

A gas in a cylinder with a moveable piston has an initial volume of 88.2 mL. If you heat the gas from 35°C to 155°C , what is its final volume (in mL)?



10.2 Cc

Conceptual Connection

Boyle’s Law and Charles’s Law

The pressure exerted on a sample of a fixed amount of gas is doubled at constant temperature, and then the temperature of the gas in kelvins is doubled at constant pressure. What is the final volume of the gas?

- (a) The final volume of the gas is twice the initial volume.
- (b) The final volume of the gas is four times the initial volume.
- (c) The final volume of the gas is one-half the initial volume.
- (d) The final volume of the gas is one-fourth the initial volume.
- (e) The final volume of the gas is the same as the initial volume.

Avogadro’s law assumes constant temperature and constant pressure and is independent of the nature of the gas.

Avogadro’s Law: Volume and Amount (in Moles)

Avogadro’s law relates the volume of gas sample to the amount of gas *at constant pressure and temperature*. According to kinetic molecular theory, when we increase the number of particles in a gas sample, the greater number of particles occupy a greater volume (at constant pressure and temperature). The volume of a gas sample as a function of the amount of gas (in moles) in the sample is shown in **Figure 10.15** ►. We can see that the relationship between volume and amount is linear. As we might expect, extrapolation to zero moles shows zero volume. This relationship, first stated formally by Amadeo Avogadro (1776–1856), is **Avogadro’s law**:

Avogadro’s law: $V \propto n$ (constant T and P)

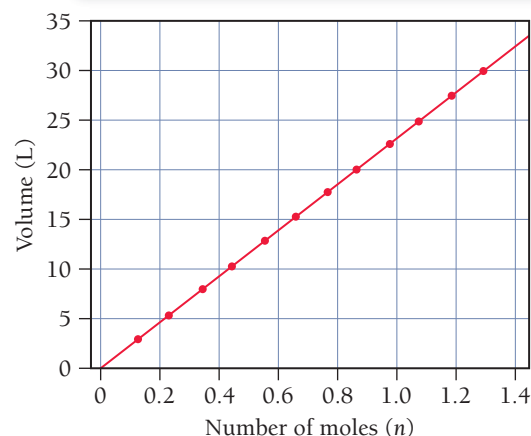
You experience Avogadro's law when you inflate a balloon. With each exhaled breath, you add more gas particles to the inside of the balloon, increasing its volume.

We can use Avogadro's law to calculate the volume of a gas following a change in the amount of the gas *as long as the pressure and temperature of the gas are constant*. For these types of calculations, we express Avogadro's law as:

$$\frac{V_1}{n_1} = \frac{V_2}{n_2} \quad [10.4]$$

where V_1 and n_1 are the initial volume and number of moles of the gas and V_2 and n_2 are the final volume and number of moles. In calculations, we use Avogadro's law in a manner similar to the other gas laws, as Example 10.4 demonstrates.

Avogadro's Law
As amount of gas increases, volume increases.



▲ FIGURE 10.15 Volume versus Number of Moles The volume of a gas sample increases linearly with the number of moles of gas in the sample (at constant temperature and pressure).

EXAMPLE 10.4

Avogadro's Law

A male athlete in a kinesiology research study has a lung volume of 6.15 L during a deep inhalation. At this volume, his lungs contain 0.254 mol of air. During exhalation, his lung volume decreases to 2.55 L. How many moles of gas does the athlete exhale during exhalation?

Assume constant temperature and pressure.

To solve the problem, first solve Avogadro's law for the number of moles of gas left in the athlete's lungs after exhalation, n_2 .

Then substitute the given quantities to calculate n_2 .

Because the lungs initially contained 0.254 mol of air, you calculate the amount of air exhaled by subtracting the result from 0.254 mol.

SOLUTION

$$\begin{aligned} \frac{V_1}{n_1} &= \frac{V_2}{n_2} \\ n_2 &= \frac{V_2}{V_1} n_1 \\ &= \frac{2.55 \text{ L}}{6.15 \text{ L}} 0.254 \text{ mol} \\ &= 0.105 \text{ mol} \end{aligned}$$

$$\begin{aligned} \text{moles exhaled} &= 0.254 \text{ mol} - 0.105 \text{ mol} \\ &= 0.149 \text{ mol} \end{aligned}$$

FOR PRACTICE 10.4

A chemical reaction occurring in a cylinder equipped with a moveable piston produces 0.621 mol of a gaseous product. If the cylinder contains 0.120 mol of gas before the reaction and has an initial volume of 2.18 L, what is its volume after the reaction? (Assume that pressure and temperature are constant and that the initial amount of gas completely reacts.)

10.5 The Ideal Gas Law

The relationships we discussed in Section 10.4 can be combined into a single law that encompasses all of the simple gas laws. So far, we have shown that:

$$\begin{aligned} V &\propto \frac{1}{P} && \text{(Boyle's law)} \\ V &\propto T && \text{(Charles's law)} \\ V &\propto n && \text{(Avogadro's law)} \end{aligned}$$



KEY CONCEPT VIDEO
**Simple Gas Laws and
Ideal Gas Law**

As we shall see in Section 10.11, the particles that compose an ideal gas have two properties: (1) negligible intermolecular forces and (2) low densities (the space between the particles is large compared to the size of the particles themselves).

L = liters
atm = atmospheres
mol = moles
K = kelvins

Combining these three expressions, we get:

$$V \propto \frac{nT}{P}$$

The volume of a gas is directly proportional to the number of moles of gas and to the temperature of the gas but is inversely proportional to the pressure of the gas. We can replace the proportionality sign with an equals sign by incorporating R , a proportionality constant called the *ideal gas constant*:

$$V = \frac{RnT}{P}$$

Rearranging, we get:

$$PV = nRT \quad [10.5]$$

This equation is the **ideal gas law**, and a hypothetical gas that exactly follows this law is an **ideal gas**. The value of R , the **ideal gas constant**, is the same for all gases and has the value:

$$R = 0.08206 \frac{\text{L} \cdot \text{atm}}{\text{mol} \cdot \text{K}}$$

The Ideal Gas Law Encompasses the Simple Gas Laws

The ideal gas law contains within it the simple gas laws. For example, recall that Boyle's law states that $V \propto 1/P$ when the amount of gas (n) and the temperature of the gas (T) are kept constant. We can rearrange the ideal gas law as follows:

$$PV = nRT$$

First, we divide both sides by P :

$$V = \frac{nRT}{P}$$

Then we put the variables that are constant, along with R , in parentheses:

$$V = (nRT) \frac{1}{P}$$

Because n and T are constant in this case, and R is always a constant, we can write:

$$V = (\text{constant}) \times \frac{1}{P}$$

which means that $V \propto 1/P$.

The ideal gas law also shows how other pairs of variables are related. For example, from Charles's law we know that $V \propto T$ at constant pressure and constant number of moles. But what if we heat a sample of gas at constant *volume* and constant number of moles? This question applies to the labels on aerosol cans such as hair spray or deodorants. These labels warn against excessive heating or incineration of the cans, even after the contents are used up. Why? An "empty" aerosol can is not really empty but contains a fixed amount of gas trapped in a fixed volume. What would happen if we were to heat the can? We can rearrange the ideal gas law to clearly see the relationship between pressure and temperature at constant volume and constant number of moles:

$$PV = nRT$$

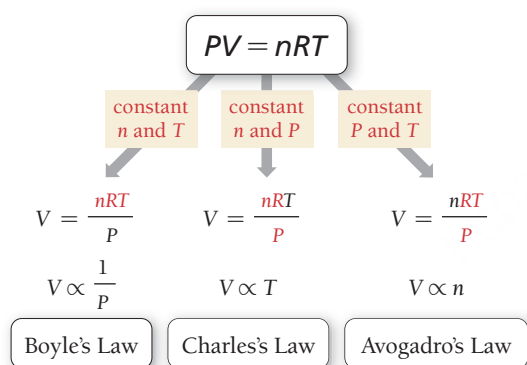
$$P = \frac{nRT}{V} = \left(\frac{nR}{V} \right) T$$

Because n and V are constant and R is always a constant:

$$P = (\text{constant}) \times T$$

This relationship between pressure and temperature is known as *Gay-Lussac's law*. As the temperature of a fixed amount of gas in a fixed volume increases, the pressure increases. In an aerosol can, this pressure increase can blow the can apart, which is why aerosol cans should not be heated or incinerated. They might explode.

Ideal Gas Law



▲ The ideal gas law contains the simple gas laws within it.



▲ Labels on aerosol cans warn against incineration. Because the volume of the can is constant, an increase in temperature causes an increase in pressure that could result in an explosion.

Calculations Using the Ideal Gas Law

We can use the ideal gas law to determine the value of any one of the four variables (P , V , n , or T) given the other three. To do so, we must express each of the quantities in the ideal gas law in the units within R :

- pressure (P) in atm, volume (V) in L, moles (n) in mol, temperature (T) in K

EXAMPLE 10.5

Ideal Gas Law I

Interactive
Worked Example
Video 10.5

PEARSON
eText
2.0

Calculate the volume occupied by 0.845 mol of nitrogen gas at a pressure of 1.37 atm and a temperature of 315 K.	
SORT The problem gives you the number of moles of nitrogen gas, the pressure, and the temperature. You are asked to find the volume.	Given: $n = 0.845 \text{ mol}$, $P = 1.37 \text{ atm}$, $T = 315 \text{ K}$ FIND: V
STRATEGIZE You are given three of the four variables (P , T , and n) in the ideal gas law and asked to find the fourth (V). The conceptual plan shows how the ideal gas law relates the known quantities and the unknown quantity.	CONCEPTUAL PLAN <div><div>n, P, T</div><div>\longrightarrow</div><div>V</div></div> <div>$PV = nRT$</div> RELATIONSHIP USED $PV = nRT$ (ideal gas law)
SOLVE To solve the problem, first solve the ideal gas law for V . Substitute the given quantities to calculate V .	SOLUTION $PV = nRT$ $V = \frac{nRT}{P}$ $V = \frac{0.845 \text{ mol} \times 0.08206 \frac{\text{L} \cdot \text{atm}}{\text{mol} \cdot \text{K}} \times 315 \text{ K}}{1.37 \text{ atm}}$ $= 15.9 \text{ L}$
CHECK The units of the answer are correct. The magnitude of the answer (15.9 L) makes sense because, as you will see in the next section, 1 mol of an ideal gas under standard temperature and pressure (273 K and 1 atm) occupies 22.4 L. Although this is not standard temperature and pressure, the conditions are close enough for a ballpark check of the answer. This gas sample contains 0.845 mol, so a volume of 15.9 L is reasonable.	
FOR PRACTICE 10.5 An 8.50-L tire contains 0.552 mol of gas at a temperature of 305 K. What is the pressure (in atm and psi) of the gas in the tire?	

EXAMPLE 10.6

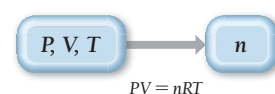
Ideal Gas Law II

Calculate the number of moles of gas in a 3.24-L basketball inflated to a <i>total pressure</i> of 24.3 psi at 25°C. (Note: The <i>total pressure</i> is not the same as the pressure read on the type of pressure gauge used for checking a car or bicycle tire. That pressure, called the <i>gauge pressure</i> , is the <i>difference</i> between the total pressure and atmospheric pressure. In this case, if atmospheric pressure is 14.7 psi, the gauge pressure would be 9.6 psi. However, for calculations involving the ideal gas law, you must use the <i>total pressure</i> of 24.3 psi.)	
SORT The problem gives you the pressure, the volume, and the temperature. You need to find the number of moles of gas.	GIVEN: $P = 24.3 \text{ psi}$, $V = 3.24 \text{ L}$, $T(^{\circ}\text{C}) = 25^{\circ}\text{C}$ FIND: n

—Continued on the next page

Continued from the previous page—

STRATEGIZE The conceptual plan shows how the ideal gas law provides the relationship between the given quantities and the quantity to be found.

CONCEPTUAL PLAN**RELATIONSHIP USED**
 $PV = nRT$ (ideal gas law)

SOLVE To solve the problem, first solve the ideal gas law for n .

Before substituting into the equation, convert P and T into the correct units.

Substitute into the equation and calculate n .

SOLUTION

$$PV = nRT$$

$$n = \frac{PV}{RT}$$

$$P = 24.3 \text{ psi} \times \frac{1 \text{ atm}}{14.7 \text{ psi}} = 1.6531 \text{ atm}$$

(Because rounding the intermediate answer would result in a slightly different final answer, we mark the least significant digit in the intermediate answer but don't round until the end.)

$$T(\text{K}) = 25 + 273 = 298 \text{ K}$$

$$n = \frac{1.6531 \text{ atm} \times 3.24 \text{ L}}{0.08206 \frac{\text{L} \cdot \text{atm}}{\text{mol} \cdot \text{K}} \times 298 \text{ K}} = 0.219 \text{ mol}$$

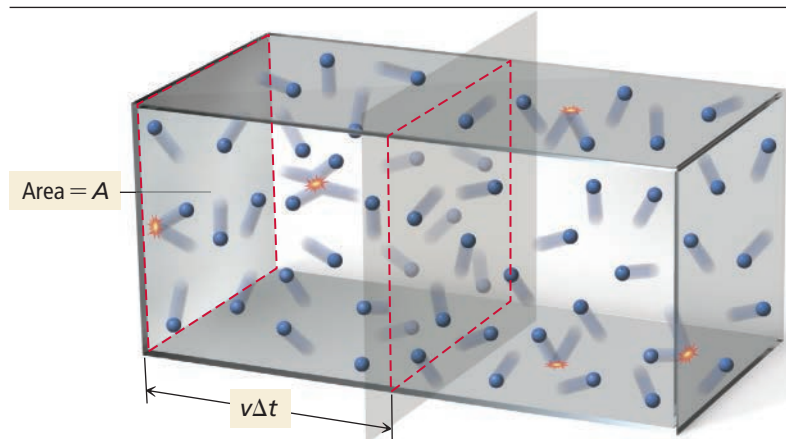
CHECK The units of the answer are correct. The magnitude of the answer (0.219 mol) makes sense because, as you will see in the next section, one mole of an ideal gas under standard temperature and pressure (273 K and 1 atm) occupies 22.4 L. At a pressure that is 65% higher than standard pressure, the volume of 1 mol of gas would be proportionally lower. This gas sample occupies 3.24 L, so the answer of 0.219 mol is reasonable.

FOR PRACTICE 10.6

What volume does 0.556 mol of gas occupy at a pressure of 715 mmHg and a temperature of 58 °C?

FOR MORE PRACTICE 10.6

Determine the pressure in mmHg of a 0.133-g sample of helium gas in a 648-mL container at a temperature of 32 °C.

Calculating Gas Pressure: A Molecular View**Kinetic Molecular Theory and the Ideal Gas Law**

We have just seen how each of the simple gas laws conceptually follows from kinetic molecular theory. We can also *derive* the ideal gas law from the postulates of kinetic molecular theory. The kinetic molecular theory is a quantitative model that *implies* $PV = nRT$. Let's explore this derivation.

The pressure on a wall of a container (**Figure 10.16**) occupied by particles in constant motion is the total force on the wall (due to the collisions) divided by the area of the wall:

$$P = \frac{F_{\text{total}}}{A} \quad [10.6]$$

◀ FIGURE 10.16 The Pressure on the Wall of a Container

We can calculate the pressure on the wall of a container by determining the total force due to collisions of the particles with the wall.

According to Newton's second law, the force (F) associated with an individual collision is given by $F = ma$, where m is the mass of the particle and a is its acceleration as it changes its direction of travel due to the collision. The acceleration for each collision is the change in velocity (Δv) divided by the time interval (Δt), so the force imparted for each collision is:

$$F_{\text{collision}} = m \frac{\Delta v}{\Delta t} \quad [10.7]$$

If a particle collides elastically with the wall, it bounces off the wall with no loss of energy. For a straight-line collision, the change in velocity is $2v$ (the particle's velocity was v before the collision and $-v$ after the collision; therefore, the change is $2v$). The force per collision is given by:

$$F_{\text{collision}} = m \frac{2v}{\Delta t} \quad [10.8]$$

The total number of collisions in the time interval Δt on a wall of surface area A is proportional to the number of particles that can reach the wall in this time interval—in other words, all particles within a distance of $v \Delta t$ of the wall. These particles occupy a volume given by $v \Delta t \times A$, and their total number is equal to this volume multiplied by the density of particles in the container (n/V):

Number of collisions \propto number of particles within $v \Delta t$

$$\propto \underbrace{v \Delta t \times A}_{\text{Volume}} \times \underbrace{\frac{n}{V}}_{\text{Density of particles}} \quad [10.9]$$

The *total force* on the wall is equal to the force per collision multiplied by the number of collisions:

$$\begin{aligned} F_{\text{total}} &= F_{\text{collision}} \times \text{number of collisions} \\ &\propto m \frac{2v}{\Delta t} \times v \Delta t \times A \times \frac{n}{V} \\ &\propto mv^2 \times A \times \frac{n}{V} \end{aligned} \quad [10.10]$$

The pressure on the wall is equal to the total force divided by the surface area of the wall:

$$\begin{aligned} P &= \frac{F_{\text{total}}}{A} \\ &\propto \frac{mv^2 \times A \times \frac{n}{V}}{A} \\ P &\propto mv^2 \times \frac{n}{V} \end{aligned} \quad [10.11]$$

Notice that Equation 10.11 contains within it Boyle's law ($P \propto 1/V$) and Avogadro's law ($V \propto n$). We can get the complete ideal gas law from postulate 2 of the kinetic molecular theory (see Section 10.2), which states that the average kinetic energy ($\frac{1}{2}mv^2$) is proportional to the temperature in kelvins (T):

$$mv^2 \propto T \quad [10.12]$$

Combining Equations 10.11 and 10.12, we get:

$$\begin{aligned} P &\propto \frac{T \times n}{V} \\ PV &\propto nT \end{aligned} \quad [10.13]$$


The proportionality can be replaced by an equals sign if we provide the correct constant, R :

$$PV = nRT \quad [10.14]$$

In other words, the kinetic molecular theory (a model for how gases behave) predicts behavior that is consistent with our observations and measurements of gases—the theory agrees with the experiments. Recall from Chapter 1 that a scientific theory is the most powerful kind of scientific knowledge. In the kinetic molecular theory, we have a model for what a gas is like. Although the model is not perfect—indeed,

it breaks down under certain conditions, as we shall see later in this chapter—it predicts a great deal about the behavior of gases. Therefore, the model is a good approximation of what a gas is actually like. A careful examination of the conditions under which the model breaks down (see Section 10.11) gives us even more insight into the behavior of gases.

10.6 Applications of the Ideal Gas Law: Molar Volume, Density, and Molar Mass of a Gas



▲ One mole of any gas occupies approximately 22.4 L at standard temperature (273 K) and pressure (1.0 atm).

In Section 10.5, we examined how we can use the ideal gas law to calculate one of the variables (P , V , T , or n) given the other three. We now turn to three other applications of the ideal gas law: molar volume, density, and molar mass.

Molar Volume at Standard Temperature and Pressure

The volume occupied by one mole of a substance is its **molar volume**. For gases, we often specify the molar volume under conditions known as **standard temperature** ($T = 0^\circ\text{C}$ or 273 K) and **pressure** ($P = 1.00\text{ atm}$), abbreviated as **STP**. Using the ideal gas law, we can determine that the molar volume of an ideal gas at STP is:

$$V = \frac{nRT}{P}$$

$$= \frac{1.00\text{ mol} \times 0.08206 \frac{\text{L} \cdot \text{atm}}{\text{mol} \cdot \text{K}} \times 273\text{ K}}{1.00\text{ atm}}$$

$$= 22.4\text{ L}$$

The molar volume of an ideal gas at STP is useful because—as we saw in the *Check* steps of Examples 10.5 and 10.6—it gives us a way to approximate the volume of an ideal gas under conditions that are close to STP.



10.3 Cc

Conceptual Connection

Molar Volume

Assuming ideal behavior, which of these gas samples has the greatest volume at STP?

- (a) 1 g of H_2 (b) 1 g of O_2 (c) 1 g of Ar

Density of a Gas

Because 1 mol of an ideal gas occupies 22.4 L at standard temperature and pressure, we can readily calculate the density of an ideal gas under these conditions. Density is mass/volume, and because the mass of one mole of a gas is simply its molar mass, the *density of a gas* is:

$$\text{density} = \frac{\text{molar mass}}{\text{molar volume}}$$

We can calculate the density of a gas at STP by using 22.4 L as the molar volume. For example, the densities of helium and nitrogen gas at STP are:

$$d_{\text{He}} = \frac{4.00\text{ g/mol}}{22.4\text{ L/mol}} = 0.179\text{ g/L} \quad d_{\text{N}_2} = \frac{28.02\text{ g/mol}}{22.4\text{ L/mol}} = 1.25\text{ g/L}$$

Notice that *the density of a gas is directly proportional to its molar mass*. The greater the molar mass of a gas, the more dense the gas. For this reason, a gas with a molar mass lower than that of air tends to rise in air. For example, both helium and hydrogen gas (molar masses of 4.00 and 2.01 g/mol, respectively)

have molar masses that are lower than the average molar mass of air (approximately 28.8 g/mol). Therefore a balloon filled with either helium or hydrogen gas floats in air.

We can calculate the density of a gas more generally (under any conditions) by using the ideal gas law. To do so, we arrange the ideal gas law as:

$$PV = nRT$$
$$\frac{n}{V} = \frac{P}{RT}$$

Because the left-hand side of this equation has units of moles/liter, it represents the *molar* density. We can obtain the density in grams/liter from the molar density by multiplying by the molar mass (\mathcal{M}):

$\frac{\text{moles}}{\text{liter}}$

\times

$\frac{\text{grams}}{\text{mole}}$

$=$

$\frac{\text{grams}}{\text{liter}}$

Molar density

Molar mass

Density in grams/liter

Therefore,

$$d = \frac{P\mathcal{M}}{RT}$$

[10.15]

Notice that, as expected, density increases with increasing molar mass. Notice also that as we discussed in Section 10.4, density decreases with increasing temperature.

The primary components of air are nitrogen (about four-fifths) and oxygen (about one-fifth). We discuss the detailed composition of air in Section 10.6.

Density

$\frac{n}{V} \mathcal{M} = \frac{P\mathcal{M}}{RT}$

Molar density

Molar mass

$d = \frac{P\mathcal{M}}{RT}$

EXAMPLE 10.7

Density of a Gas

Interactive
Worked Example
Video 10.7



Calculate the density of nitrogen gas at 125°C and a pressure of 755 mmHg.	
SORT The problem gives you the temperature and pressure of a gas and asks you to find its density. The problem states that the gas is nitrogen.	GIVEN: $T(^{\circ}\text{C}) = 125^{\circ}\text{C}$, $P = 755 \text{ mmHg}$ FIND: d
STRATEGIZE Equation 10.15 provides the relationship between the density of a gas and its temperature, pressure, and molar mass. The temperature and pressure are given. You can calculate the molar mass from the formula of the gas, N_2 .	CONCEPTUAL PLAN <div><div>P, T, \mathcal{M}</div><div>\rightarrow</div><div>d</div></div> $d = \frac{P\mathcal{M}}{RT}$ RELATIONSHIPS USED $d = \frac{P\mathcal{M}}{RT}$ (density of a gas) molar mass $\text{N}_2 = 28.02 \text{ g/mol}$
SOLVE To solve the problem, gather each of the required quantities in the correct units. Convert the temperature to kelvins and the pressure to atmospheres. Substitute the quantities into the equation to calculate density.	SOLUTION $T(\text{K}) = 125 + 273 = 398 \text{ K}$ $P = 755 \text{ mmHg} \times \frac{1 \text{ atm}}{760 \text{ mmHg}} = 0.99342 \text{ atm}$ $d = \frac{P\mathcal{M}}{RT}$ $= \frac{0.99342 \text{ atm} \left(28.02 \frac{\text{g}}{\text{mol}} \right)}{0.08206 \frac{\text{L} \cdot \text{atm}}{\text{mol} \cdot \text{K}} (398 \text{ K})}$ $= 0.852 \text{ g/L}$

—Continued on the next page

Continued from the previous page—

CHECK The units of the answer are correct. The magnitude of the answer (0.852 g/L) makes sense because earlier you calculated the density of nitrogen gas at STP as 1.25 g/L. The temperature is higher than standard temperature, so it follows that the density is lower.

FOR PRACTICE 10.7

Calculate the density of xenon gas at a pressure of 742 mmHg and a temperature of 45°C.

FOR MORE PRACTICE 10.7

A gas has a density of 1.43 g/L at a temperature of 23°C and a pressure of 0.789 atm. Calculate its molar mass.



10.4 Cc

Conceptual
Connection

Density of a Gas

Arrange these gases in order of increasing density at STP: Ne, Cl₂, F₂, and O₂.

Molar Mass of a Gas

We can use the ideal gas law in combination with mass measurements to calculate the molar mass of an unknown gas. First, we measure the mass and volume of an unknown gas under conditions of known pressure and temperature. Then we determine the amount of the gas in moles from the ideal gas law. Finally, we calculate the molar mass by dividing the mass (in grams) by the amount (in moles), as shown in Example 10.8.

EXAMPLE 10.8

Molar Mass of a Gas

Interactive
Worked Example
Video 10.8



A sample of gas has a mass of 0.311 g. Its volume is 0.225 L at a temperature of 55 °C and a pressure of 886 mmHg. Find its molar mass.

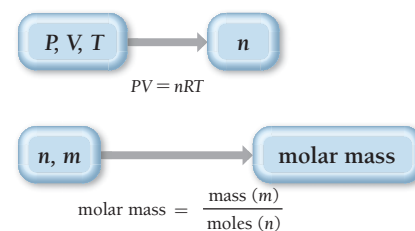
SORT The problem gives you the mass of a gas sample, along with its volume, temperature, and pressure. You are asked to find the molar mass.

STRATEGIZE The conceptual plan has two parts. In the first part, use the ideal gas law to find the number of moles of gas.

In the second part, use the definition of molar mass to find the molar mass.

GIVEN: $m = 0.311 \text{ g}$, $V = 0.225 \text{ L}$,
 $T(^{\circ}\text{C}) = 55^{\circ}\text{C}$, $P = 886 \text{ mmHg}$
FIND: molar mass (g/mol)

CONCEPTUAL PLAN



RELATIONSHIPS USED

$$PV = nRT$$

$$\text{molar mass} = \frac{\text{mass } (m)}{\text{moles } (n)}$$

SOLVE To find the number of moles, first solve the ideal gas law for n .

SOLUTION

$$PV = nRT$$

$$n = \frac{PV}{RT}$$

Before substituting into the equation for n , convert the pressure to atm and the temperature to K.

Substitute into the equation and calculate n , the number of moles.

Finally, use the number of moles (n) and the given mass (m) to find the molar mass.

$$P = 886 \text{ mmHg} \times \frac{1 \text{ atm}}{760 \text{ mmHg}} = 1.1658 \text{ atm}$$
$$T(\text{K}) = 55 + 273 = 328 \text{ K}$$
$$n = \frac{1.1658 \text{ atm} \times 0.225 \text{ L}}{0.08206 \frac{\text{L} \cdot \text{atm}}{\text{mol} \cdot \text{K}} \times 328 \text{ K}} = 9.7454 \times 10^{-3} \text{ mol}$$
$$\text{molar mass} = \frac{\text{mass (m)}}{\text{moles (n)}} = \frac{0.311 \text{ g}}{9.7454 \times 10^{-3} \text{ mol}} = 31.9 \text{ g/mol}$$

CHECK The units of the answer are correct. The magnitude of the answer (31.9 g/mol) is a reasonable number for a molar mass. If your answer is some very small number (such as any number smaller than 1) or a very large number, you solved the problem incorrectly. Most gases have molar masses between one and several hundred grams per mole.

FOR PRACTICE 10.8

A sample of gas has a mass of 827 mg. Its volume is 0.270 L at a temperature of 88 °C and a pressure of 975 mmHg. Find its molar mass.

10.7 Mixtures of Gases and Partial Pressures

Many gas samples are not pure; they are mixtures of gases. Dry air, for example, is a mixture containing nitrogen, oxygen, argon, carbon dioxide, and a few other gases in trace amounts (Table 10.2).

According to kinetic molecular theory, the particles in a gas mixture have negligible size and they do not interact. Consequently, each of the components in an ideal gas mixture acts independently of the others. For example, the nitrogen molecules in air exert a certain pressure—78% of the total pressure—that is independent of the other gases in the mixture. Likewise, the oxygen molecules in air exert a certain pressure—21% of the total pressure—that is also independent of the other gases in the mixture. The pressure due to any individual component in a gas mixture is its **partial pressure (P_n)**. We can calculate partial pressure from the ideal gas law by assuming that each gas component acts independently:

$$P_n = n_n \frac{RT}{V}$$

For a multicomponent gas mixture, we calculate the partial pressure of each component from the ideal gas law and the number of moles of that component (n_n) as follows:

$$P_a = n_a \frac{RT}{V}; \quad P_b = n_b \frac{RT}{V}; \quad P_c = n_c \frac{RT}{V}; \quad \dots$$

[10.16]

According to kinetic molecular theory, the only property that distinguishes one type of particle from another is its mass. However, even particles of different masses have the same average kinetic energy at a given temperature, so they exert the same force upon collision with a surface. Consequently, adding different kinds of gases to a gas mixture has the same effect on pressure as simply adding more particles. The partial pressures of all the components sum to the overall pressure:

$$P_{\text{total}} = P_a + P_b + P_c + \dots$$

[10.17]

where P_{total} is the total pressure and P_a, P_b, P_c, \dots , are the partial pressures of the components. This relationship is known as **Dalton's law of partial pressures**.

Combining Equations 10.16 and 10.17, we get:

$$\begin{aligned} P_{\text{total}} &= P_a + P_b + P_c + \dots \\ &= n_a \frac{RT}{V} + n_b \frac{RT}{V} + n_c \frac{RT}{V} + \dots \\ &= (n_a + n_b + n_c + \dots) \frac{RT}{V} \\ &= (n_{\text{total}}) \frac{RT}{V} \end{aligned}$$

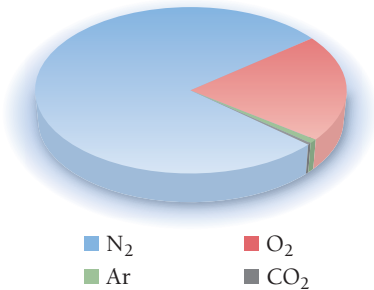
[10.18]

PEARSON
eText
2.0

KEY CONCEPT VIDEO
Mixtures of Gases and
Partial Pressures

TABLE 10.2 Composition of Dry Air

Gas	Percent by Volume (%)
Nitrogen (N ₂)	78
Oxygen (O ₂)	21
Argon (Ar)	0.9
Carbon dioxide (CO ₂)	0.04



The total number of moles in the mixture, when substituted into the ideal gas law, indicates the total pressure of the sample.

If we divide Equation 10.16 by Equation 10.18, we get:

$$\frac{P_a}{P_{\text{total}}} = \frac{n_a (RT/V)}{n_{\text{total}} (RT/V)} = \frac{n_a}{n_{\text{total}}} \quad [10.19]$$

The quantity n_a/n_{total} , the number of moles of a component in a mixture divided by the total number of moles in the mixture, is the **mole fraction** (χ_a):

$$\chi_a = \frac{n_a}{n_{\text{total}}} \quad [10.20]$$

Rearranging Equation 10.19 and substituting the definition of mole fraction (Equation 10.20) gives us:

$$\begin{aligned} \frac{P_a}{P_{\text{total}}} &= \frac{n_a}{n_{\text{total}}} \\ P_a &= \frac{n_a}{n_{\text{total}}} P_{\text{total}} = \chi_a P_{\text{total}} \end{aligned}$$

or more simply:

$$P_a = \chi_a P_{\text{total}} \quad [10.21]$$


The partial pressure of a component in a gaseous mixture is its mole fraction multiplied by the total pressure. For gases, the mole fraction of a component is equivalent to its percent by volume divided by 100%. Therefore, based on Table 10.2, we calculate the partial pressure of nitrogen (P_{N_2}) in air at 1.00 atm to be:

$$\begin{aligned} P_{\text{N}_2} &= 0.78 \times 1.00 \text{ atm} \\ &= 0.78 \text{ atm} \end{aligned}$$

Likewise, the partial pressure of oxygen in air at 1.00 atm is 0.21 atm, and the partial pressure of argon in air is 0.01 atm. Applying Dalton's law of partial pressures to air at 1.00 atm:

$$\begin{aligned} P_{\text{total}} &= P_{\text{N}_2} + P_{\text{O}_2} + P_{\text{Ar}} \\ P_{\text{total}} &= 0.78 \text{ atm} + 0.21 \text{ atm} + 0.01 \text{ atm} \\ &= 1.00 \text{ atm} \end{aligned}$$

For these purposes, we ignore the contribution of CO_2 and other trace gases in air because they are so small.



Conceptual
Connection

10.5

Partial Pressures

A gas mixture contains an equal number of moles of He and Ne. The total pressure of the mixture is 3.0 atm. What are the partial pressures of He and Ne?

EXAMPLE 10.9

Total Pressure and Partial Pressures

A 1.00-L mixture of helium, neon, and argon has a total pressure of 662 mmHg at 298 K. If the partial pressure of helium is 341 mmHg and the partial pressure of neon is 112 mmHg, what mass of argon is present in the mixture?

SORT The problem gives you partial pressures for two of the three components in a gas mixture, along with the total pressure, the volume, and the temperature, and asks you to find the mass of the third component.

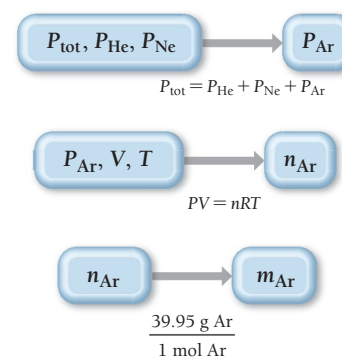
GIVEN: $P_{\text{He}} = 341 \text{ mmHg}$,
 $P_{\text{Ne}} = 112 \text{ mmHg}$,
 $P_{\text{total}} = 662 \text{ mmHg}$,
 $V = 1.00 \text{ L}$, $T = 298 \text{ K}$
FIND: m_{Ar}

STRATEGIZE You can find the mass of argon from the number of moles of argon, which you can calculate from the partial pressure of argon and the ideal gas law. Begin by using Dalton's law to determine the partial pressure of argon.

Then use the partial pressure of argon together with the volume of the sample and the temperature to find the number of moles of argon.

Finally, use the molar mass of argon to calculate the mass of argon from the number of moles of argon.

CONCEPTUAL PLAN



RELATIONSHIPS USED

$$P_{\text{total}} = P_{\text{He}} + P_{\text{Ne}} + P_{\text{Ar}} \text{ (Dalton's law)}$$

$$PV = nRT \text{ (ideal gas law)}$$

$$\text{molar mass Ar} = 39.95 \text{ g/mol}$$

SOLVE Follow the conceptual plan. To find the partial pressure of argon, solve the equation for P_{Ar} and substitute the values of the other partial pressures to calculate P_{Ar} .

Convert the partial pressure from mmHg to atm and use it in the ideal gas law to calculate the amount of argon in moles.

Use the molar mass of argon to convert from amount of argon in moles to mass of argon.

SOLUTION

$$P_{\text{total}} = P_{\text{He}} + P_{\text{Ne}} + P_{\text{Ar}}$$

$$P_{\text{Ar}} = P_{\text{total}} - P_{\text{He}} - P_{\text{Ne}}$$

$$= 662 \text{ mmHg} - 341 \text{ mmHg} - 112 \text{ mmHg}$$

$$= 209 \text{ mmHg}$$

$$209 \text{ mmHg} \times \frac{1 \text{ atm}}{760 \text{ mmHg}} = 0.275 \text{ atm}$$

$$n = \frac{PV}{RT} = \frac{0.275 \text{ atm}(1.00 \text{ L})}{0.08206 \frac{\text{L} \cdot \text{atm}}{\text{mol} \cdot \text{K}}(298 \text{ K})} = 1.125 \times 10^{-2} \text{ mol Ar}$$

$$1.125 \times 10^{-2} \text{ mol Ar} \times \frac{39.95 \text{ g Ar}}{1 \text{ mol Ar}} = 0.449 \text{ g Ar}$$

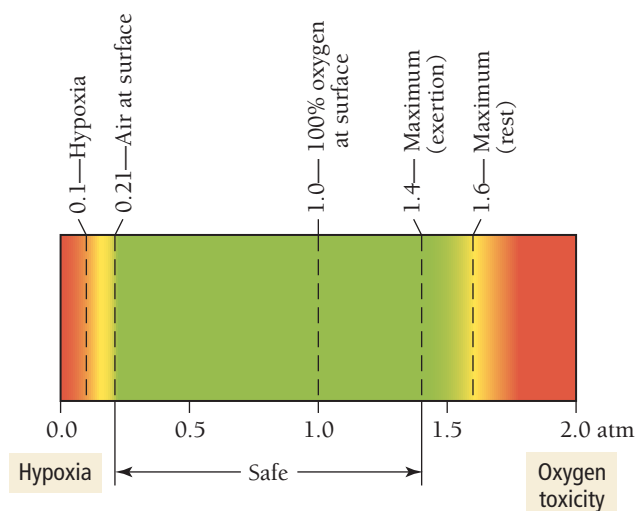
CHECK The units of the answer are correct. The magnitude of the answer makes sense because the volume is 1.0 L, which at STP would contain about 1/22 mol. Because the partial pressure of argon in the mixture is about 1/3 of the total pressure, you can roughly estimate about 1/66 of one molar mass of argon, which is fairly close to your answer.

FOR PRACTICE 10.9

A sample of hydrogen gas is mixed with water vapor. The mixture has a total pressure of 755 torr, and the water vapor has a partial pressure of 24 torr. What amount (in moles) of hydrogen gas is contained in 1.55 L of this mixture at 298 K?

Deep-Sea Diving and Partial Pressures

Our lungs have evolved to breathe oxygen at a partial pressure of $P_{\text{O}_2} = 0.21 \text{ atm}$. If the total air pressure decreases—when a person climbs a mountain, for example—the partial pressure of oxygen also decreases. On top of Mount Everest, where the total pressure is 0.311 atm, the partial pressure of oxygen is only 0.065 atm. Low oxygen levels produce a physiological condition called **hypoxia** or oxygen starvation (**Figure 10.17** ► on the next page). Mild hypoxia causes dizziness, headache, and shortness of breath. Severe hypoxia, which occurs when (P_{O_2}) drops below 0.1 atm, may result in unconsciousness or even death. For this reason, climbers hoping to make the summit of Mount Everest usually carry oxygen to breathe.

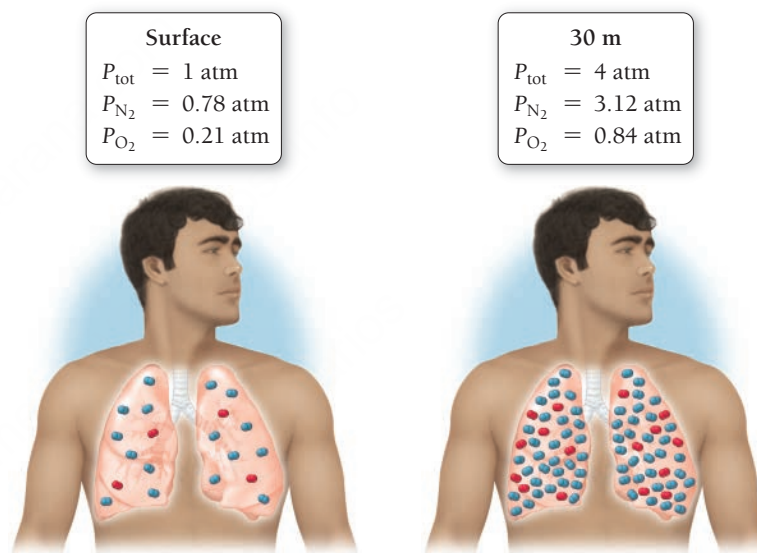


▲ **FIGURE 10.17** Oxygen Partial Pressure

Limits The partial pressure of oxygen in air at sea level is 0.21 atm. Partial pressures of oxygen below 0.1 atm and above 1.4 atm are dangerous to humans.

While not as dangerous as a lack of oxygen, too much oxygen can also cause physiological problems. Recall from Section 10.4 that scuba divers breathe pressurized air. At 30 m, a scuba diver breathes air at a total pressure of 4.0 atm, which means P_{O_2} is about 0.84 atm. This elevated partial pressure of oxygen raises the density of oxygen molecules in the lungs, resulting in a higher concentration of oxygen in body tissues. When P_{O_2} increases beyond 1.4 atm, the increased oxygen concentration in body tissues causes a condition called **oxygen toxicity** that results in muscle twitching, tunnel vision, and convulsions. Divers who venture too deep without proper precautions have drowned because of oxygen toxicity.

A second problem associated with breathing pressurized air is the increase of nitrogen in the lungs. At 30 m, a scuba diver breathes nitrogen at $P_{N_2} = 3.12$ atm, which increases the nitrogen concentration in body tissues and fluids. When P_{N_2} increases beyond about 4 atm, a condition called **nitrogen narcosis** or *rapture of the deep* results. Divers describe the effects of this condition as similar to being inebriated or drunk. A diver breathing compressed air at 60 m feels as if he has consumed too much wine.



▲ When a diver breathes compressed air, the abnormally high partial pressure of oxygen in the lungs leads to an elevated concentration of oxygen in body tissues.

To avoid oxygen toxicity and nitrogen narcosis, deep-sea divers—those who descend beyond 50 m—breathe specialized mixtures of gases. One common mixture is heliox, a mixture of helium and oxygen. These mixtures usually contain a smaller percentage of oxygen than is typically found in air, thereby lowering the risk of oxygen toxicity. Heliox also contains helium instead of nitrogen, eliminating the risk of nitrogen narcosis.

EXAMPLE 10.10

Partial Pressures and Mole Fractions

A 12.5-L scuba diving tank contains a helium-oxygen (heliox) mixture of 24.2 g of He and 4.32 g of O_2 at 298 K. Calculate the mole fraction and partial pressure of each component in the mixture and the total pressure of the mixture.

SORT The problem gives the masses of two gases in a mixture and the volume and temperature of the mixture. You are to find the mole fraction and partial pressure of each component, as well as the total pressure.

GIVEN: $m_{\text{He}} = 24.2 \text{ g}$, $m_{O_2} = 4.32 \text{ g}$,
 $V = 12.5 \text{ L}$, $T = 298 \text{ K}$

FIND: χ_{He} , χ_{O_2} , P_{He} , P_{O_2} , P_{total}

STRATEGIZE The conceptual plan has several parts. To calculate the mole fraction of each component, you must first find the number of moles of each component. In the first part of the conceptual plan, convert the masses to moles using the molar masses.

In the second part, calculate the mole fraction of each component using the mole fraction definition (Equation 10.20).

To calculate *partial pressures* calculate the *total pressure* and then use the mole fractions from the previous calculation to determine the partial pressures. Calculate the total pressure from the sum of the moles of both components. (Alternatively, you can calculate the partial pressures of the components individually, using the number of moles of each component and adding them to obtain the total pressure.)

Use the mole fractions of each component and the total pressure to calculate the partial pressure of each component.

SOLVE Follow the plan to solve the problem. Begin by converting each of the masses to amounts in moles.

Calculate each of the mole fractions.

Calculate the total pressure.

Finally, calculate the partial pressure of each component.

CONCEPTUAL PLAN



$$\chi_{\text{He}} = \frac{n_{\text{He}}}{n_{\text{He}} + n_{\text{O}_2}}; \chi_{\text{O}_2} = \frac{n_{\text{O}_2}}{n_{\text{He}} + n_{\text{O}_2}}$$

$$P_{\text{total}} = \frac{(n_{\text{He}} + n_{\text{O}_2})RT}{V}$$

$$P_{\text{He}} = \chi_{\text{He}} P_{\text{total}}; P_{\text{O}_2} = \chi_{\text{O}_2} P_{\text{total}}$$

RELATIONSHIPS USED

$$\chi_a = n_a / n_{\text{total}} \text{ (mole fraction definition)}$$

$$P_{\text{total}} V = n_{\text{total}} RT \text{ (ideal gas law)}$$

$$P_a = \chi_a P_{\text{total}}$$

SOLUTION

$$24.2 \text{ g He} \times \frac{1 \text{ mol He}}{4.00 \text{ g He}} = 6.05 \text{ mol He}$$

$$4.32 \text{ g O}_2 \times \frac{1 \text{ mol O}_2}{32.00 \text{ g O}_2} = 0.135 \text{ mol O}_2$$

$$\chi_{\text{He}} = \frac{n_{\text{He}}}{n_{\text{He}} + n_{\text{O}_2}} = \frac{6.05}{6.05 + 0.135} = 0.97817$$

$$\chi_{\text{O}_2} = \frac{n_{\text{O}_2}}{n_{\text{He}} + n_{\text{O}_2}} = \frac{0.135}{6.05 + 0.135} = 0.021827$$

$$P_{\text{total}} = \frac{(n_{\text{He}} + n_{\text{O}_2})RT}{V}$$

$$= \frac{(6.05 \text{ mol} + 0.135 \text{ mol}) \left(0.08206 \frac{\text{L} \cdot \text{atm}}{\text{mol} \cdot \text{K}} \right) (298 \text{ K})}{12.5 \text{ L}}$$

$$= 12.099 \text{ atm}$$

$$P_{\text{He}} = \chi_{\text{He}} P_{\text{total}} = 0.97817 \times 12.099 \text{ atm} = 11.8 \text{ atm}$$

$$P_{\text{O}_2} = \chi_{\text{O}_2} P_{\text{total}} = 0.021827 \times 12.099 \text{ atm} = 0.264 \text{ atm}$$

CHECK The units of the answers are correct, and the magnitudes are reasonable.

FOR PRACTICE 10.10

A diver breathes a heliox mixture with an oxygen mole fraction of 0.050. What must the total pressure be for the partial pressure of oxygen to be 0.21 atm?

Collecting Gases over Water

When the desired product of a chemical reaction is a gas, we can collect the gas by the displacement of water. For example, suppose we use the reaction of zinc with hydrochloric acid as a source of hydrogen gas:



To collect the gas, we can set up an apparatus like the one shown in **Figure 10.18** ▼. As the hydrogen gas forms, it bubbles through the water and gathers in the collection flask. The hydrogen gas collected in this way is not pure. It is mixed with water vapor because some water molecules evaporate and mix with the hydrogen molecules.

The partial pressure of water in the mixture, which we call its **vapor pressure**, depends on temperature (Table 10.3). Vapor pressure increases with increasing temperature because higher temperatures cause more water molecules to evaporate.

Suppose we collect the hydrogen gas over water at a total pressure of 758.2 mmHg and a temperature of 25 °C. What is the partial pressure of the hydrogen gas? We know that the total pressure is 758.2 mmHg and that the partial pressure of water is 23.78 mmHg (its vapor pressure at 25 °C):

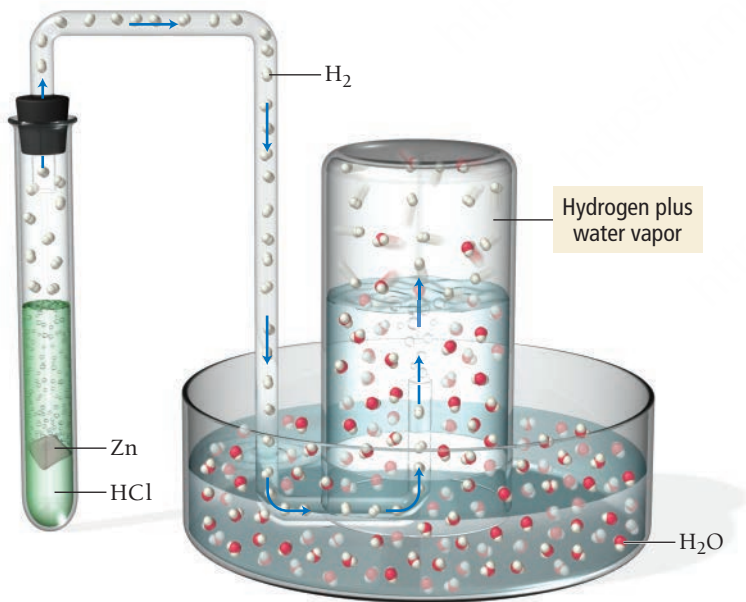
$$P_{\text{total}} = P_{\text{H}_2} + P_{\text{H}_2\text{O}}$$

$$758.2 \text{ mmHg} = P_{\text{H}_2} + 23.78 \text{ mmHg}$$

Therefore:

$$\begin{aligned} P_{\text{H}_2} &= 758.2 \text{ mmHg} - 23.78 \text{ mmHg} \\ &= 734.4 \text{ mmHg} \end{aligned}$$

The partial pressure of the hydrogen in the mixture is 734.4 mmHg.



▲ **FIGURE 10.18 Collecting a Gas over Water** When we collect the gaseous product of a chemical reaction over water, the product molecules (in this case H₂) are mixed with water molecules. The pressure of those water molecules is equal to the vapor pressure of water at that temperature. The partial pressure of the product is the total pressure minus the partial pressure of water.

TABLE 10.3 Vapor Pressure of Water versus Temperature

Temperature (°C)	Pressure (mmHg)	Temperature (°C)	Pressure (mmHg)
0	4.58	55	118.2
5	6.54	60	149.6
10	9.21	65	187.5
15	12.79	70	233.7
20	17.55	75	289.1
25	23.78	80	355.1
30	31.86	85	433.6
35	42.23	90	525.8
40	55.40	95	633.9
45	71.97	100	760.0
50	92.6		

We will discuss vapor pressure in detail in Chapter 11.

Appendix II includes a more complete table of the vapor pressure of water versus temperature.

EXAMPLE 10.11**Collecting Gases over Water**

In order to determine the rate of photosynthesis, the oxygen gas emitted by an aquatic plant is collected over water at a temperature of 293 K and a total pressure of 755.2 mmHg. Over a specific time period, a total of 1.02 L of gas is collected. What mass of oxygen gas (in grams) forms?

SORT The problem gives the volume of gas collected over water as well as the temperature and the pressure. You are asked to find the mass in grams of oxygen that forms.

STRATEGIZE You can find the mass of oxygen from moles of oxygen, which you can get from the ideal gas law and the partial pressure of oxygen. Find the partial pressure of oxygen by subtracting the partial pressure of water at 293 K (20°C) from the total pressure.

Use the ideal gas law to determine the number of moles of oxygen from its partial pressure, volume, and temperature.

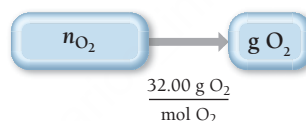
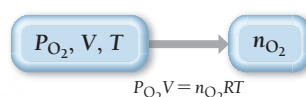
Then use the molar mass of oxygen to convert the number of moles to grams.

GIVEN: $V = 1.02 \text{ L}$, $P_{\text{total}} = 755.2 \text{ mmHg}$,
 $T = 293 \text{ K}$

FIND: g O_2

CONCEPTUAL PLAN

$$P_{\text{O}_2} = P_{\text{total}} - P_{\text{H}_2\text{O}} (20^\circ\text{C})$$

**RELATIONSHIPS USED**

$$P_{\text{total}} = P_a + P_b + P_c + \dots \quad (\text{Dalton's law})$$

$$PV = nRT \quad (\text{ideal gas law})$$

SOLVE Follow the conceptual plan to solve the problem. Begin by calculating the partial pressure of oxygen in the oxygen/water mixture. You can find the partial pressure of water at 20°C in Table 10.3.

Next, solve the ideal gas law for number of moles.

Before substituting into the ideal gas law, convert the partial pressure of oxygen from mmHg to atm.

Substitute into the ideal gas law to find the number of moles of oxygen.

Finally, use the molar mass of oxygen to convert to grams of oxygen.

SOLUTION

$$\begin{aligned} P_{\text{O}_2} &= P_{\text{total}} - P_{\text{H}_2\text{O}} (20^\circ\text{C}) \\ &= 755.2 \text{ mmHg} - 17.55 \text{ mmHg} = 737.65 \text{ mmHg} \end{aligned}$$

$$n_{\text{O}_2} = \frac{P_{\text{O}_2} V}{RT}$$

$$737.65 \text{ mmHg} \times \frac{1 \text{ atm}}{760 \text{ mmHg}} = 0.97059 \text{ atm}$$

$$n_{\text{O}_2} = \frac{P_{\text{O}_2} V}{RT} = \frac{0.97059 \text{ atm} (1.02 \text{ L})}{0.08206 \frac{\text{L} \cdot \text{atm}}{\text{mol} \cdot \text{K}} (293 \text{ K})} = 4.1175 \times 10^{-2} \text{ mol}$$

$$4.1175 \times 10^{-2} \text{ mol O}_2 \times \frac{32.00 \text{ g O}_2}{1 \text{ mol O}_2} = 1.32 \text{ g O}_2$$

CHECK The answer is in the correct units. You can quickly check the magnitude of the answer by using molar volume. Under STP 1 L is about 1/22 of 1 mol. Therefore the answer should be about 1/22 the molar mass of oxygen ($1/22 \times 32 = 1.45$). The magnitude of the answer seems reasonable.

FOR PRACTICE 10.11

A common way to make hydrogen gas in the laboratory is to place a metal such as zinc in hydrochloric acid. The hydrochloric acid reacts with the metal to produce hydrogen gas, which is then collected over water. Suppose a student carries out this reaction and collects a total of 154.4 mL of gas at a pressure of 742 mmHg and a temperature of 25°C. What mass of hydrogen gas (in mg) does the student collect?

10.8 Temperature and Molecular Velocities

According to kinetic molecular theory, particles of different masses have the same average kinetic energy at a given temperature. The kinetic energy of a particle depends on its mass and velocity according to the equation:

$$\text{KE} = \frac{1}{2}mv^2$$

The only way for particles of different masses to have the same kinetic energy is for them to have different velocities, as Conceptual Connection 10.1 demonstrates.

In a gas mixture at a given temperature, lighter particles travel faster (on average) than heavier ones.

In kinetic molecular theory, we define the root mean square velocity (u_{rms}) of a particle as:

$$u_{\text{rms}} = \sqrt{\overline{u^2}} \quad [10.22]$$

where $\overline{u^2}$ is the average of the squares of the particle velocities. Even though the root mean square velocity of a collection of particles is not identical to the average velocity, the two are close in value and conceptually similar. Root mean square velocity is a special type of average. The average kinetic energy of one mole of gas particles is given by:

$$\text{KE}_{\text{avg}} = \frac{1}{2}N_A m \overline{u^2} \quad [10.23]$$

where N_A is Avogadro's number.

Postulate 2 of the kinetic molecular theory states that the average kinetic energy is proportional to the temperature in kelvins. The constant of proportionality in this relationship is $(3/2)R$:

$$\text{KE}_{\text{avg}} = (3/2)RT \quad [10.24]$$

where R is the gas constant, but in different units ($R = 8.314 \text{ J/mol} \cdot \text{K}$) than those we use in the ideal gas law. If we combine Equations 10.23 and 10.24, and solve for $\overline{u^2}$, we get:

$$(1/2)N_A m \overline{u^2} = (3/2)RT$$

$$\overline{u^2} = \frac{(3/2)RT}{(1/2)N_A m} = \frac{3RT}{N_A m}$$

Taking the square root of both sides we get:

$$\sqrt{\overline{u^2}} = u_{\text{rms}} = \sqrt{\frac{3RT}{N_A m}} \quad [10.25]$$

In Equation 10.25, m is the mass of a particle in kg and N_A is Avogadro's number. The product $N_A m$, then, is the molar mass in kg/mol. If we call this quantity \mathcal{M} , the expression for mean square velocity as a function of temperature is the following important result:

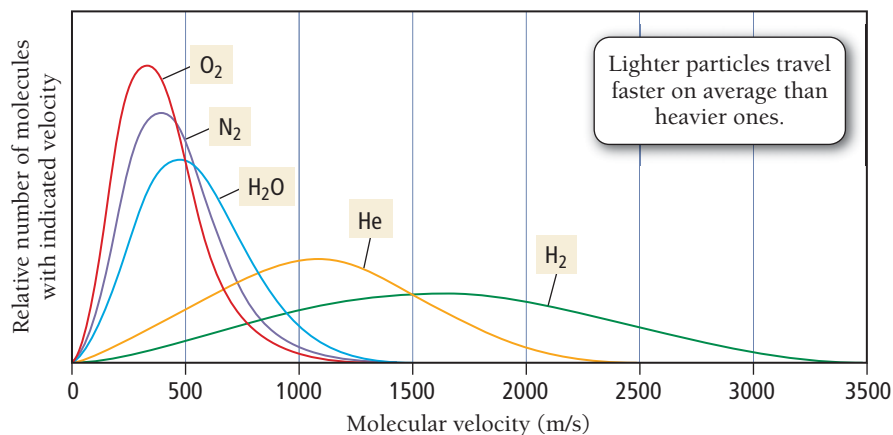
$$u_{\text{rms}} = \sqrt{\frac{3RT}{\mathcal{M}}} \quad [10.26]$$

The root mean square velocity of a collection of gas particles is proportional to the square root of the temperature in kelvins and inversely proportional to the square root of the molar mass of the particles (which because of the units of R , is in kilograms per mole). The root mean square velocity of nitrogen molecules at 25°C , for example, is 515 m/s (1152 mi/h). The root mean square velocity of hydrogen molecules at room temperature is 1920 m/s (4295 mi/h). Notice that the lighter molecules move much faster at a given temperature.

The $(3/2)R$ proportionality constant comes from a derivation that is beyond the current scope of this textbook.

The joule (J) is a unit of energy discussed in more detail in Section E.6.
 $\left(1 \text{ J} = 1 \text{ kg} \frac{\text{m}^2}{\text{s}^2}\right)$

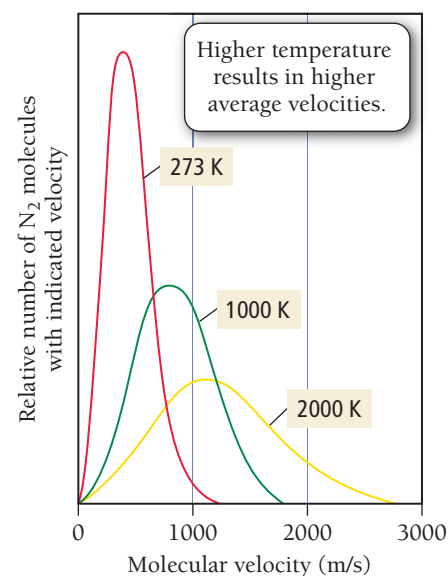
Variation of Velocity Distribution with Molar Mass



▲ FIGURE 10.19 Velocity Distribution for Several Gases at 25 °C At a given temperature, there is a distribution of velocities among the particles in a sample of gas. The exact shape and peak of the distribution vary with the molar mass of the gas.

The root mean square velocity, as we have seen, is a kind of average velocity. Some particles are moving faster, and some are moving more slowly than this average. The velocities of all the particles in a gas sample form distributions such as those shown in **Figure 10.19** ▲. We can see from these distributions that some particles are indeed traveling at the root mean square velocity. However, many particles are traveling faster and many slower than the root mean square velocity. For lighter particles, such as helium and hydrogen, the velocity distribution is shifted toward higher velocities and the curve becomes broader, indicating a wider range of velocities. **Figure 10.20** ► is the velocity distribution for nitrogen at different temperatures. As the temperature increases, the root mean square velocity increases and the distribution becomes broader.

Variation of Velocity Distribution with Temperature



▲ FIGURE 10.20 Velocity Distribution for Nitrogen at Several Temperatures As the temperature of a gas sample increases, the velocity distribution of the molecules shifts toward higher velocity and becomes less sharply peaked.

EXAMPLE 10.12

Root Mean Square Velocity

Calculate the root mean square velocity of oxygen molecules at 25 °C.

SORT The problem describes the kind of molecule and its temperature and asks you to find the root mean square velocity.

STRATEGIZE The conceptual plan for this problem illustrates how to use the molar mass of oxygen and the temperature (in kelvins) with the equation that defines the root mean square velocity to calculate root mean square velocity.

SOLVE Gather the required quantities in the correct units. Note that molar mass must be in kg/mol.

GIVEN: O_2 , $t = 25^\circ\text{C}$

FIND: u_{rms}

CONCEPTUAL PLAN

$$\boxed{M, T} \rightarrow \boxed{u_{\text{rms}}}$$

$$u_{\text{rms}} = \sqrt{\frac{3RT}{M}}$$

RELATIONSHIP USED

$$u_{\text{rms}} = \sqrt{\frac{3RT}{M}} \text{ (Equation 10.26)}$$

SOLUTION

$$T = 25 + 273 = 298 \text{ K}$$

$$M = \frac{32.00 \text{ g O}_2}{1 \text{ mol O}_2} \times \frac{1 \text{ kg}}{1000 \text{ g}} = \frac{32.00 \times 10^{-3} \text{ kg O}_2}{1 \text{ mol O}_2}$$

—Continued on the next page

Continued from the previous page—

Substitute the quantities into the equation to calculate root mean square velocity. Note that $1 \text{ J} = 1 \text{ kg} \cdot \text{m}^2/\text{s}^2$.

$$\begin{aligned} u_{\text{rms}} &= \sqrt{\frac{3RT}{\mathcal{M}}} = \sqrt{\frac{3 \left(8.314 \frac{\text{J}}{\text{mol} \cdot \text{K}} \right) (298 \text{ K})}{\frac{32.00 \times 10^{-3} \text{ kg O}_2}{1 \text{ mol O}_2}}} \\ &= \sqrt{2.32 \times 10^5 \frac{\text{J}}{\text{kg}}} \\ &= \sqrt{2.32 \times 10^5 \frac{\text{kg} \cdot \text{m}^2}{\text{kg} \cdot \text{s}^2}} = 482 \text{ m/s} \end{aligned}$$

CHECK The units of the answer (m/s) are correct. The magnitude of the answer is reasonable because oxygen is slightly heavier than nitrogen and should therefore have a slightly lower root mean square velocity at the same temperature. Recall that the root mean square velocity of nitrogen is 515 m/s at 25°C.

FOR PRACTICE 10.12

Calculate the root mean square velocity of gaseous xenon atoms at 25°C.



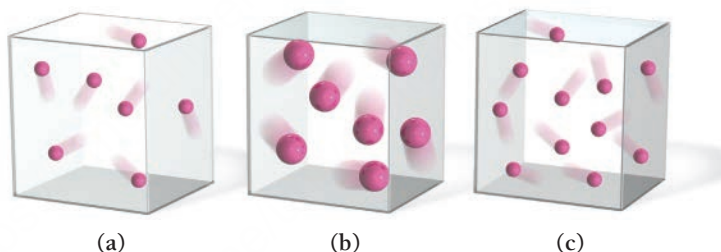
10.6

Cc

Conceptual
Connection

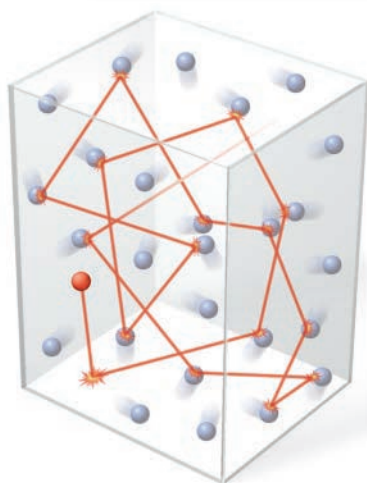
Kinetic Molecular Theory and Particle Mass

Which sample of an ideal gas has the greatest pressure? Assume that the mass of each particle is proportional to its size and that all the samples are at the same temperature.



Typical Gas Molecule Path

The average distance between collisions is the mean free path.



10.9 Mean Free Path, Diffusion, and Effusion of Gases

We saw in Section 10.8 that the root mean square velocity of gas molecules at room temperature is in the range of hundreds of meters per second. However, suppose that your roommate just put on too much perfume in the bathroom only 2 m away. Why does it take a minute or two before you can smell the fragrance? Although most molecules in a perfume bottle have higher molar masses than nitrogen, their velocities are still hundreds of meters per second, so why the delay? The answer is that, even though gaseous particles travel at tremendous speeds, they also travel in haphazard paths (**Figure 10.21** ◀). To a perfume molecule, the path from the perfume bottle in the bathroom to your nose 2 m away is like a bargain hunter's path through a busy

◀ **FIGURE 10.21 Mean Free Path** A molecule in a volume of gas follows a haphazard path, involving many collisions with other molecules.

shopping mall during a clearance sale. The molecule travels only a short distance before it collides with another molecule, changes direction, only to collide again, and so on. In fact, at room temperature and atmospheric pressure, a molecule in the air experiences several billion collisions per second.

The average distance that a molecule travels between collisions is its **mean free path**. At room temperature and atmospheric pressure, the mean free path of a nitrogen molecule, which has a molecular diameter of 300 pm (four times the covalent radius), is 93 nm, or about 310 molecular diameters. If a nitrogen molecule were the size of a golf ball, it would travel about 40 ft between collisions. Mean free path increases with *decreasing* pressure. Under conditions of ultrahigh vacuum (10^{-10} torr), the mean free path of a nitrogen molecule is hundreds of kilometers.

The process by which gas molecules spread out in response to a concentration gradient is **diffusion**, and even though the particles undergo many collisions, the root mean square velocity still influences the rate of diffusion. Heavier molecules diffuse more slowly than lighter ones, so the first molecules you smell from a perfume mixture (in a room with no air currents) are the lighter ones.

A process related to diffusion is **effusion**, the process by which a gas escapes from a container into a vacuum through a small hole (**Figure 10.22** ▲). The rate of effusion is also related to root mean square velocity—heavier molecules effuse more slowly than lighter ones. The rate of effusion—the amount of gas that effuses in a given time—is inversely proportional to the square root of the molar mass of the gas, as follows:

$$\text{rate} \propto \frac{1}{\sqrt{\mathcal{M}}}$$

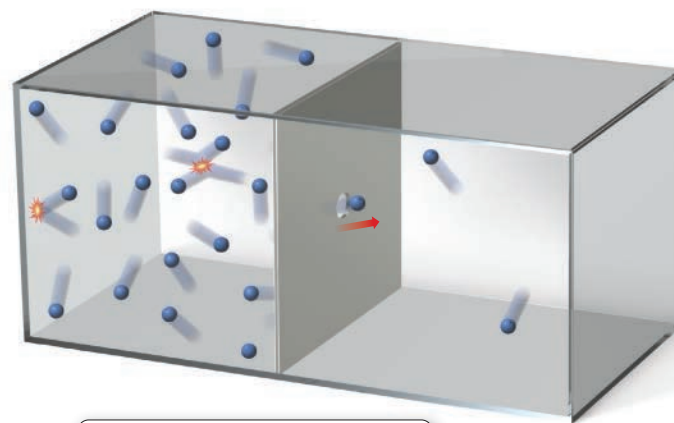
The ratio of effusion rates of two different gases is given by **Graham's law of effusion**, named after Thomas Graham (1805–1869):

$$\frac{\text{rate}_A}{\text{rate}_B} = \sqrt{\frac{\mathcal{M}_B}{\mathcal{M}_A}} \quad [10.27]$$

In this expression, rate_A and rate_B are the effusion rates of gases A and B and \mathcal{M}_A and \mathcal{M}_B are their molar masses.

Graham's law explains, in part, why helium balloons only float for a day or so. Because helium has such a low molar mass, it escapes from the balloon quite quickly. A balloon filled with air, by contrast, remains inflated longer because the gas particles within it have a higher average molar mass.

Effusion



▲ **FIGURE 10.22 Effusion** Effusion is the escape of a gas from a container into a vacuum through a small hole.

In a ventilated room, air currents greatly enhance the transport of gas molecules.

EXAMPLE 10.13 Graham's Law of Effusion

An unknown gas effuses at a rate that is 0.462 times that of nitrogen gas (at the same temperature). Calculate the molar mass of the unknown gas in g/mol.

SORT The problem gives you the ratio of effusion rates for the unknown gas and nitrogen and asks you to find the molar mass of the unknown gas.

GIVEN: $\frac{\text{Rate}_{\text{unk}}}{\text{Rate}_{\text{N}_2}} = 0.462$

FIND: \mathcal{M}_{unk}

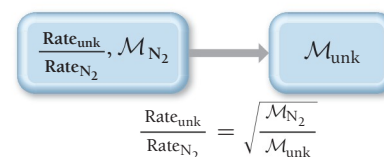
—Continued on the next page

Interactive
Worked Example
Video 10.13

PEARSON
eText
2.0

Continued from the previous page—

STRATEGIZE The conceptual plan uses Graham's law of effusion. You are given the ratio of rates, and you know the molar mass of the nitrogen. You can use Graham's law to determine the molar mass of the unknown gas.

CONCEPTUAL PLAN**RELATIONSHIP USED**

$$\frac{\text{rate}_A}{\text{rate}_B} = \sqrt{\frac{\mathcal{M}_B}{\mathcal{M}_A}} \text{ (Graham's law)}$$

SOLVE Solve the equation for \mathcal{M}_{unk} , substitute the correct values, and calculate.

SOLUTION

$$\begin{aligned} \frac{\text{rate}_{\text{unk}}}{\text{rate}_{\text{N}_2}} &= \sqrt{\frac{\mathcal{M}_{\text{N}_2}}{\mathcal{M}_{\text{unk}}}} \\ \mathcal{M}_{\text{unk}} &= \frac{\mathcal{M}_{\text{N}_2}}{\left(\frac{\text{rate}_{\text{unk}}}{\text{rate}_{\text{N}_2}}\right)^2} \\ &= \frac{28.02 \text{ g/mol}}{(0.462)^2} = 131 \text{ g/mol} \end{aligned}$$

CHECK The units of the answer are correct. The magnitude of the answer seems reasonable for the molar mass of a gas. In fact, from the answer, you can even conclude that the gas is probably xenon, which has a molar mass of 131.29 g/mol.

FOR PRACTICE 10.13

Find the ratio of effusion rates of hydrogen gas and krypton gas.

10.10 Gases in Chemical Reactions: Stoichiometry Revisited

In Chapter 7, we discussed how to use the coefficients in chemical equations as conversion factors between number of moles of reactants and number of moles of products in a chemical reaction. We can use these conversion factors to determine, for example, the mass of product obtained in a chemical reaction based on a given mass of reactant or the mass of one reactant needed to react completely with a given mass of another reactant. The general conceptual plan for these kinds of calculations is:



where A and B are two different substances involved in the reaction and the conversion factor between amounts (in moles) of each comes from the stoichiometric coefficients in the balanced chemical equation.

In reactions involving *gaseous* reactant or products, we often specify the quantity of a gas in terms of its volume at a given temperature and pressure. As we have seen, stoichiometry involves relationships between amounts in moles. For stoichiometric calculations involving gases, we can use the ideal gas law to determine the amounts in moles from the volumes or to determine the volumes from the amounts in moles:

$$n = \frac{PV}{RT} \quad V = \frac{nRT}{P}$$

The general conceptual plan for these kinds of calculations is:

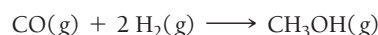


Examples 10.14 and 10.15 demonstrate this kind of calculation.

The pressures here could also be partial pressures.

EXAMPLE 10.14**Gases in Chemical Reactions**Interactive
Worked Example
Video 10.14PEARSON
eText
2.0

Methanol (CH_3OH) can be synthesized by the reaction:



What volume (in L) of hydrogen gas, at a temperature of 355 K and a pressure of 738 mmHg, do we need to synthesize 35.7 g of methanol?

SORT The problem gives the mass of methanol, the product of a chemical reaction. You are asked to find the required volume of one of the reactants (hydrogen gas) at a specified temperature and pressure.

STRATEGIZE Calculate the required volume of hydrogen gas from the number of moles of hydrogen gas, which you can obtain from the number of moles of methanol via the stoichiometry of the reaction.

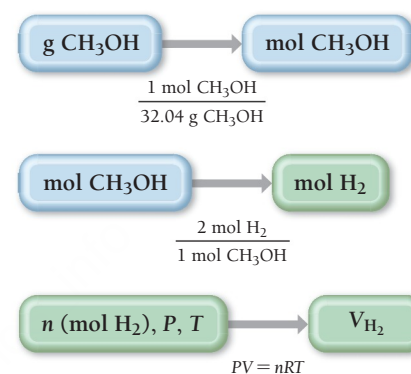
First, find the number of moles of methanol from its mass by using the molar mass.

Then use the stoichiometric relationship from the balanced chemical equation to find the number of moles of hydrogen you need to form that quantity of methanol.

Finally, substitute the number of moles of hydrogen together with the pressure and temperature into the ideal gas law to find the volume of hydrogen.

GIVEN: 35.7 g CH_3OH ,
 $T = 355 \text{ K}$, $P = 738 \text{ mmHg}$

FIND: V_{H_2}

CONCEPTUAL PLAN**RELATIONSHIPS USED**

$PV = nRT$ (ideal gas law)

2 mol H_2 : 1 mol CH_3OH (from balanced chemical equation)

molar mass $\text{CH}_3\text{OH} = 32.04 \text{ g/mol}$

SOLVE Follow the conceptual plan to solve the problem. Begin by using the mass of methanol to determine the number of moles of methanol.

Next, convert the number of moles of methanol to moles of hydrogen.

Finally, use the ideal gas law to find the volume of hydrogen. Before substituting into the equation, you need to convert the pressure to atmospheres.

SOLUTION

$$35.7 \text{ g CH}_3\text{OH} \times \frac{1 \text{ mol CH}_3\text{OH}}{32.04 \text{ g CH}_3\text{OH}} = 1.1142 \text{ mol CH}_3\text{OH}$$

$$1.1142 \text{ mol CH}_3\text{OH} \times \frac{2 \text{ mol H}_2}{1 \text{ mol CH}_3\text{OH}} = 2.2284 \text{ mol H}_2$$

$$V_{\text{H}_2} = \frac{n_{\text{H}_2}RT}{P}$$

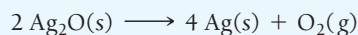
$$P = 738 \text{ mmHg} \times \frac{1 \text{ atm}}{760 \text{ mmHg}} = 0.97105 \text{ atm}$$

$$V_{\text{H}_2} = \frac{(2.2284 \text{ mol}) \left(0.08206 \frac{\text{L} \cdot \text{atm}}{\text{mol} \cdot \text{K}} \right) (355 \text{ K})}{0.97105 \text{ atm}} = 66.9 \text{ L}$$

CHECK The units of the answer are correct. The magnitude of the answer (66.9 L) seems reasonable. You are given slightly more than one molar mass of methanol, which is therefore slightly more than 1 mol of methanol. From the equation you can see that you need 2 mol hydrogen to make 1 mol methanol, so the answer must be slightly greater than 2 mol hydrogen. Under standard temperature and pressure, slightly more than 2 mol hydrogen occupies slightly more than $2 \times 22.4 \text{ L} = 44.8 \text{ L}$. At a temperature greater than standard temperature, the volume would be even greater; therefore, this answer is reasonable.

FOR PRACTICE 10.14

In the following reaction, 4.58 L of O_2 was formed at $P = 745 \text{ mmHg}$ and $T = 308 \text{ K}$. How many grams of Ag_2O decomposed?

**FOR MORE PRACTICE 10.14**

In the reaction in For Practice 10.14, what mass of $\text{Ag}_2\text{O}(s)$ (in grams) is required to form 388 mL of oxygen gas at $P = 734 \text{ mmHg}$ and 25°C ?

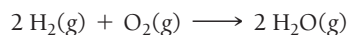
Molar Volume and Stoichiometry

In Section 10.5, we saw that, under standard temperature and pressure, 1 mol of an ideal gas occupies 22.4 L. Consequently, if a reaction occurs at or near standard temperature and pressure, we can use $1 \text{ mol} = 22.4 \text{ L}$ as a conversion factor in stoichiometric calculations, as we demonstrate in Example 10.15.

EXAMPLE 10.15

Using Molar Volume in Gas Stoichiometric Calculations

How many grams of water form when 1.24 L of H_2 gas at STP completely reacts with O_2 ?



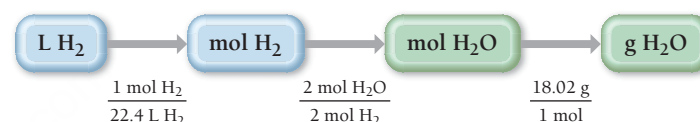
SORT You are given the volume of hydrogen gas (a reactant) at STP and asked to determine the mass of water that forms upon complete reaction.

STRATEGIZE Because the reaction occurs under standard temperature and pressure, you can convert directly from the volume (in L) of hydrogen gas to the amount in moles. Then use the stoichiometric relationship from the balanced equation to find the number of moles of water formed. Finally, use the molar mass of water to obtain the mass of water formed.

GIVEN: 1.24 L H_2

FIND: g H_2O

CONCEPTUAL PLAN



RELATIONSHIPS USED

$1 \text{ mol} = 22.4 \text{ L}$ (at STP)

$2 \text{ mol H}_2 : 2 \text{ mol H}_2\text{O}$ (from balanced equation)

molar mass $\text{H}_2\text{O} = 18.02 \text{ g/mol}$


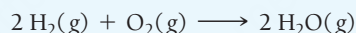
SOLVE Follow the conceptual plan to solve the problem.

$$1.24 \text{ L H}_2 \times \frac{1 \text{ mol H}_2}{22.4 \text{ L H}_2} \times \frac{2 \text{ mol H}_2\text{O}}{2 \text{ mol H}_2} \times \frac{18.02 \text{ g H}_2\text{O}}{1 \text{ mol H}_2\text{O}} = 0.998 \text{ g H}_2\text{O}$$

CHECK The units of the answer are correct. The magnitude of the answer (0.998 g) is about $1/18$ of the molar mass of water, roughly equivalent to the approximately $1/22$ of a mole of hydrogen gas given, as you would expect for the 1:1 stoichiometric relationship between number of moles of hydrogen and number of moles of water.

FOR PRACTICE 10.15

How many liters of oxygen (at STP) are required to form 10.5 g of H_2O ?



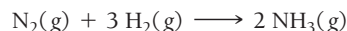
10.7



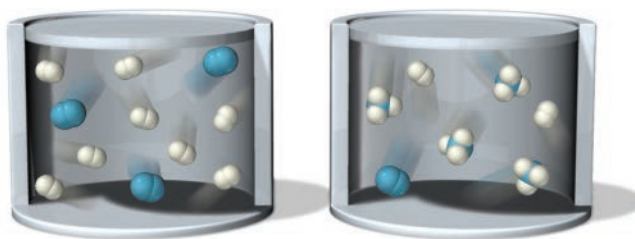
Conceptual
Connection

Pressure and Number of Moles

Nitrogen and hydrogen react to form ammonia according to the following equation:



Consider these representations of the initial mixture of reactants and the resulting mixture after the reaction has been allowed to react for some time.

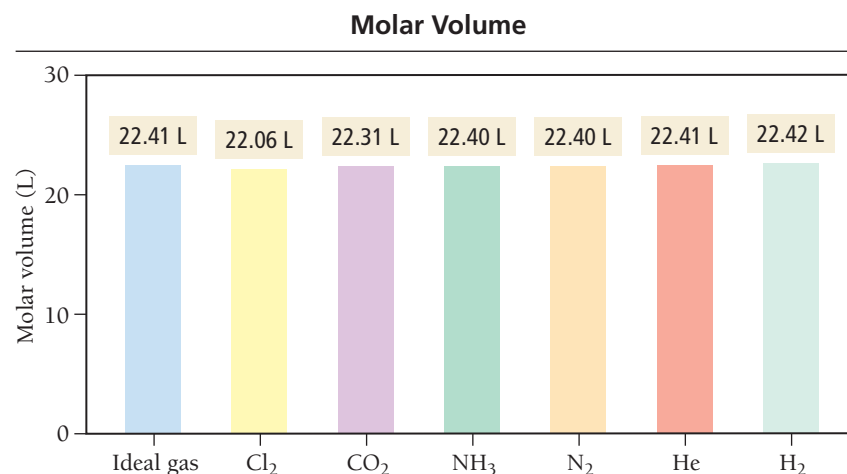


If the volume is kept constant, and nothing is added to the reaction mixture, what happens to the total pressure during the course of the reaction?

- (a) The pressure increases. (b) The pressure decreases. (c) The pressure does not change.

10.11 Real Gases: The Effects of Size and Intermolecular Forces

One mole of an ideal gas has a volume of 22.41 L at STP. **Figure 10.23** shows the molar volume of several real gases at STP. As you can see, most of these gases have a volume that is very close to 22.41 L, meaning that they act very nearly as ideal gases. Gases behave ideally when both of the following are true: (a) the volume of the gas particles is small compared to the space between them; and (b) the forces between the gas particles are not significant. At STP, these assumptions are valid for most common gases. However, these assumptions break down at higher pressures or lower temperatures.



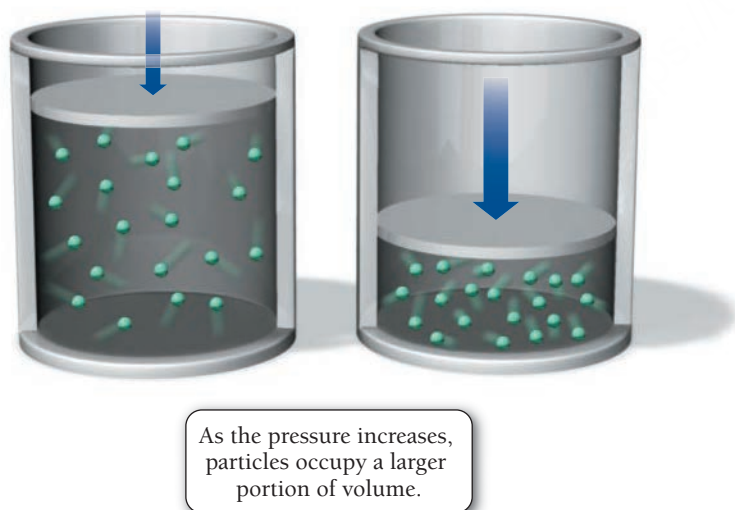
▲ FIGURE 10.23 Molar Volumes of Real Gases The molar volumes of several gases at STP are close to 22.414 L, indicating that their departures from ideal behavior are small.

The Effect of the Finite Volume of Gas Particles

The finite volume of gas particles—that is, their actual *size*—becomes important at high pressure because the volume of the particles themselves occupies a significant portion of the total gas volume (**Figure 10.24**). We can see the effect of particle volume by comparing the molar volume of argon to the molar volume of an ideal gas as a function of pressure at 500 K, as shown in **Figure 10.25**. At low pressures, the molar volume of argon is nearly identical to that of an ideal gas. But as the pressure increases, the molar volume of argon becomes *greater than* that of an ideal gas. At the higher pressures, the argon atoms themselves occupy a significant portion of the gas volume, making the actual volume greater than that predicted by the ideal gas law.

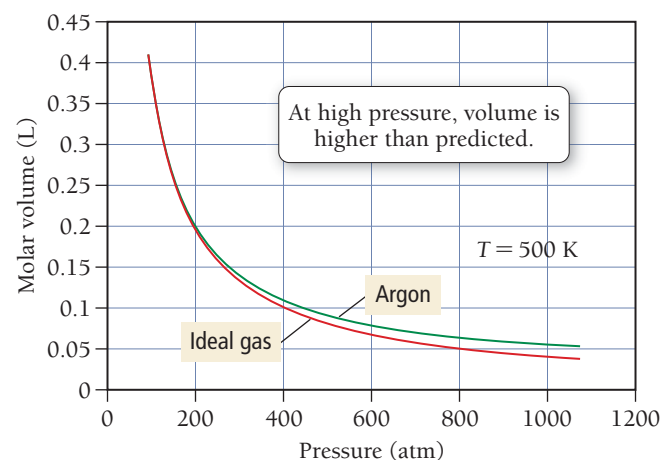
In 1873, Johannes van der Waals (1837–1923) modified the ideal gas equation to fit the behavior of real gases. From the graph for argon in Figure 10.25, we can see that the ideal gas law predicts a volume that is too small. Van der Waals suggested a small correction factor that accounts for the volume of the gas particles themselves:

$$\begin{array}{ll} \text{Ideal behavior} & V = \frac{nRT}{P} \\ \text{Corrected for volume of gas particles} & V = \frac{nRT}{P} + nb \end{array} \quad [10.28]$$



▲ FIGURE 10.24 Particle Volume and Ideal Behavior As a gas is compressed, the gas particles themselves begin to occupy a significant portion of the total gas volume, leading to deviations from ideal behavior.

Nonideal Behavior: The Effect of Particle Volume



▲ FIGURE 10.25 The Effect of Particle Volume At high pressures, 1 mol of argon occupies a larger volume than 1 mol of an ideal gas because of the volume of the argon atoms themselves. (This example was chosen to minimize the effects of intermolecular forces, which are very small in argon at 500 K, thereby isolating the effect of particle volume.)

TABLE 10.4 Van der Waals Constants for Common Gases

Gas	a (L ² · atm/mol ²)	b (L/mol)
He	0.0342	0.02370
Ne	0.211	0.0171
Ar	1.35	0.0322
Kr	2.32	0.0398
Xe	4.19	0.0511
H ₂	0.244	0.0266
N ₂	1.39	0.0391
O ₂	1.36	0.0318
Cl ₂	6.49	0.0562
H ₂ O	5.46	0.0305
CH ₄	2.25	0.0428
CO ₂	3.59	0.0427
CCl ₄	20.4	0.1383

The correction adds the quantity nb to the volume, where n is the number of moles and b is a constant that depends on the gas (Table 10.4). We can rearrange the corrected equation as follows:

$$(V - nb) = \frac{nRT}{P}$$

[10.29]

The Effect of Intermolecular Forces

Intermolecular forces, which we will discuss in more detail in Chapter 11, are attractions between the atoms or molecules that compose any substance. These attractions are typically small in gases and therefore do not matter much at low pressure because the molecules are too far apart to “feel” the attractions. They also do not matter much at high temperatures because the molecules have a lot of kinetic energy, and when two particles with high kinetic energies collide, a weak attraction between them does not affect the collision much. At lower temperatures, however, the collisions occur with less kinetic energy, and weak attractions can affect the collisions.

We can understand this difference with an analogy to billiard balls. Imagine two billiard balls that are coated with a substance that makes them slightly sticky. If they collide when moving at high velocities, the stickiness does not have much of an effect—the balls bounce off one another as if the sticky substance is not even there. However, if the two billiard balls collide when moving very slowly (say, barely rolling), the sticky substance has an effect—the billiard balls might even stick together and not bounce off one another.

The effect of these weak attractions between particles is a decrease in the number of collisions with the surfaces of the container, and a corresponding decrease in the pressure compared to that of an ideal gas. We can see the effect of intermolecular forces when we compare the pressure of 1.0 mol of xenon gas to the pressure of 1.0 mol of an ideal gas as a function of temperature and at a fixed volume of 1.0 L, as shown in **Figure 10.26** ▼. At high temperature, the pressure of the xenon gas is nearly identical to that of an ideal gas. But at lower temperatures, the pressure of xenon is *less than* that of an ideal gas. At the lower temperatures, the xenon atoms spend more time interacting with each other and less time colliding with the walls, making the actual pressure less than that predicted by the ideal gas law.

From the graph for xenon shown in Figure 10.26, we can see that the ideal gas law predicts a pressure that is too large at low temperatures. Van der Waals suggested a small correction factor that accounts for the intermolecular forces between gas particles:

Ideal behavior

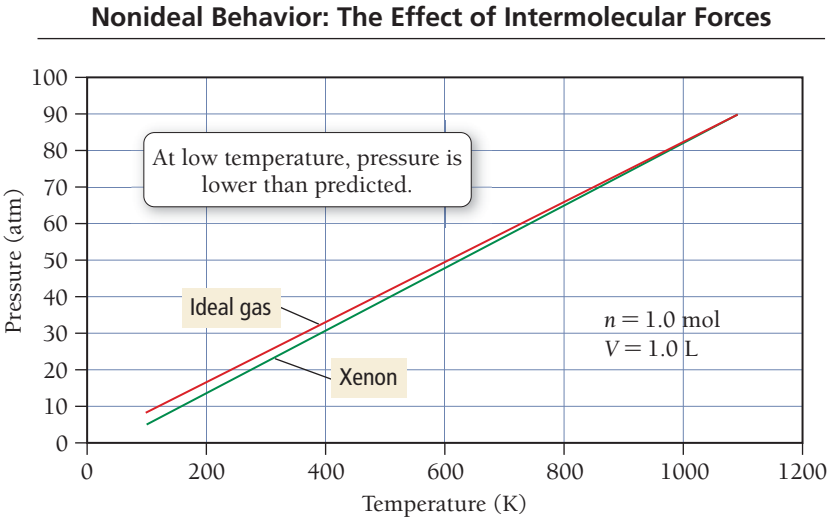
$$P = \frac{nRT}{V}$$

Corrected for intermolecular forces

$$P = \frac{nRT}{V} - a\left(\frac{n}{V}\right)^2$$

[10.30]

► **FIGURE 10.26** The Effect of Intermolecular Forces At low temperatures, the pressure of xenon is less than an ideal gas exerts because interactions among xenon molecules reduce the number of collisions with the walls of the container.



The correction subtracts the quantity $a(n/V)^2$ from the pressure, where n is the number of moles, V is the volume, and a is a constant that depends on the gas (see Table 10.4). Notice that the correction factor increases as n/V (the number of moles of particles per unit volume) increases because a greater concentration of particles makes it more likely that they will interact with one another. We can rearrange the corrected equation as:

$$P + a\left(\frac{n}{V}\right)^2 = \frac{nRT}{V} \quad [10.31]$$

Van der Waals Equation

We can combine the effects of particle volume (Equation 10.29) and particle intermolecular forces (Equation 10.31) into one equation that describes nonideal gas behavior:

$$\left[P + a\left(\frac{n}{V}\right)^2\right] \times [V - nb] = nRT$$

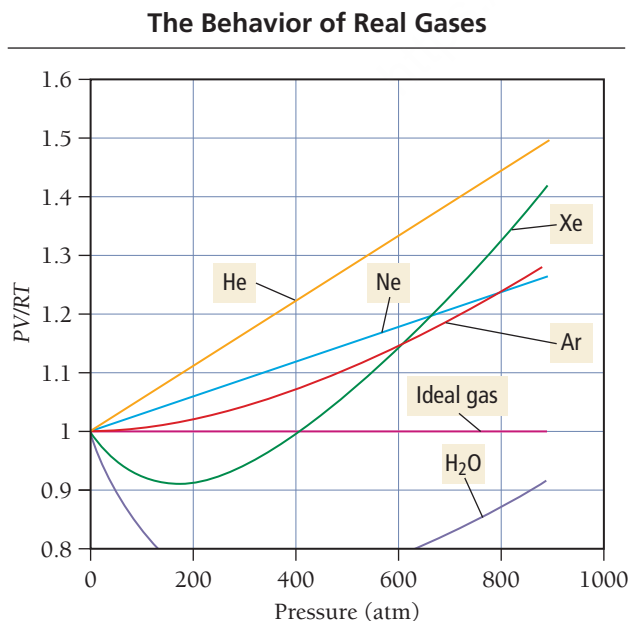
Correction for intermolecular forces
Correction for particle volume

This equation is the **van der Waals equation**, and we can use it to calculate the properties of a gas under nonideal conditions.

Real Gas Behavior

We can see the combined effects of particle volume and intermolecular forces by examining a plot of PV/RT versus P for 1 mol of a number of real gases (**Figure 10.27** ▼). For an ideal gas, $PV/RT = n$, the number of moles of gas. Therefore, for 1 mol of an ideal gas, PV/RT is equal to 1, as shown in the plot. For real gases, PV/RT deviates from 1, but the deviations are not uniform. For example, water displays a large negative deviation from PV/RT because, for water, the effect of intermolecular forces on lowering the pressure (relative to an ideal gas) is far greater than the effect of particle size on increasing the volume. We can see in Table 10.4 that water has a high value of a , the constant that corrects for intermolecular forces, but a moderate value of b , the constant that corrects for particle size. Therefore, PV/RT for water is lower than predicted from the ideal gas law.

By contrast, consider the behavior of helium, which displays a positive deviation from the ideal behavior. Helium has very weak intermolecular forces, and their effect on lowering the pressure (relative to ideal gas) is small compared to the effect of particle size on increasing the volume. Therefore, PV/RT is greater than predicted from the ideal gas law for helium.



◀ **FIGURE 10.27 Real versus Ideal Behavior**
For 1 mol of an ideal gas, PV/RT is equal to 1. The combined effects of the volume of gas particles and the interactions among them cause each real gas to deviate from ideal behavior in a slightly different way. These curves were calculated at a temperature of 500 K.



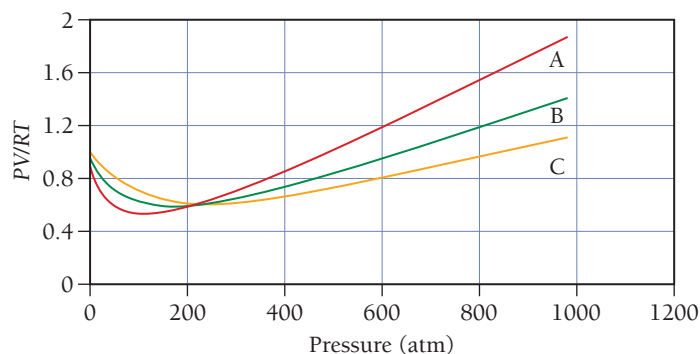
10.8

Cc

Conceptual
Connection

Real Gases

This graph shows PV/RT for carbon dioxide at three different temperatures. Rank the curves in order of increasing temperature.



SELF-ASSESSMENT

QUIZ



- A gas sample has an initial pressure of 547 mmHg and an initial volume of 0.500 L. What is the pressure (in atm) if we decrease the volume of the sample to 225 mL? (Assume constant temperature and constant number of moles of gas.)
 - 1.60×10^{-3} atm
 - 1.60 atm
 - 0.324 atm
 - 1.22 atm
- A gas sample has a volume of 178 mL at 0.00°C. The temperature is raised (at constant pressure) until the volume is 211 mL. What is the temperature of the gas sample in °C at this volume?
 - 0.00°C
 - 324°C
 - 43°C
 - 51°C
- What is the pressure of 1.78 g of nitrogen gas confined to a volume of 0.118 L at 25°C?
 - 13.2 atm
 - 369 atm
 - 1.10 atm
 - 26.3 atm
- What is the density of a sample of argon gas at 55°C and 765 mmHg?
 - 2.99 g/L
 - 1.13×10^3 g/L
 - 1.49 g/L
 - 8.91 g/L
- Which gas sample has the greatest volume at STP?
 - 10.0 g Ar
 - 10.0 g Kr
 - 10.0 g Xe
 - None of the above. (They all have the same volume.)
- A 1.25-g gas sample occupies 663 mL at 25°C and 1.00 atm. What is the molar mass of the gas?
 - 0.258 g/mol
 - 0.0461 g/mol
 - 3.87 g/mol
 - 46.1 g/mol
- A 255-mL gas sample contains argon and nitrogen at a temperature of 65°C. The total pressure of the sample is 725 mmHg, and the partial pressure of argon is 231 mmHg. What mass of nitrogen is present in the sample?
 - 0.324 g nitrogen
 - 0.167 g nitrogen
 - 0.0837 g nitrogen
 - 0.870 g nitrogen
- A gas mixture in a 1.55-L container at 298 K contains 10.0 g of Ne and 10.0 g of Ar. Calculate the partial pressure (in atm) of Ne and Ar in the container.
 - $P_{\text{Ne}} = 10.5$ atm, $P_{\text{Ar}} = 5.29$ atm
 - $P_{\text{Ne}} = 5.83$ atm, $P_{\text{Ar}} = 2.95$ atm
 - $P_{\text{Ne}} = 5.88$ atm, $P_{\text{Ar}} = 5.88$ atm
 - $P_{\text{Ne}} = 7.82$ atm, $P_{\text{Ar}} = 3.95$ atm
- A gas sample at STP contains 1.15 g oxygen and 1.55 g nitrogen. What is the volume of the gas sample?
 - 1.26 L
 - 2.04 L
 - 4.08 L
 - 61.0 L
- Aluminum reacts with chlorine gas to form aluminum chloride.

$$2 \text{Al}(s) + 3 \text{Cl}_2(g) \longrightarrow 2 \text{AlCl}_3(s)$$
 What minimum volume of chlorine gas (at 298 K and 225 mmHg) is required to completely react with 7.85 g of aluminum?
 - 36.0 L
 - 24.0 L
 - 0.0474 L
 - 16.0 L
- Calculate the root mean square velocity of $\text{I}_2(g)$ at 373 K.
 - 19.0 m/s
 - 191 m/s
 - 6.05 m/s
 - 99.1 m/s

12. Which gas has the greatest kinetic energy at STP?
a) He
b) Ne
c) Ar
d) None of the above. (All have the same kinetic energy.)

13. A sample of Xe takes 75 seconds to effuse out of a container. An unknown gas takes 37 seconds to effuse out of the identical container under identical conditions. What is the most likely identity of the unknown gas?
a) He
b) O₂
c) Br₂
d) Kr
14. Consider the generic reaction: $2\text{A(g)} + \text{B(g)} \longrightarrow 2\text{C(g)}$. If a flask initially contains 1.0 atm of A and 1.0 atm of B, what is the pressure in the flask if the reaction proceeds to completion? (Assume constant volume and temperature.)
a) 1.0 atm
b) 1.5 atm
c) 2.0 atm
d) 3.0 atm

15. Rank the gases Ar, N₂, CH₄, and C₂H₆ in order of increasing density at STP.
a) CH₄ < C₂H₆ < N₂ < Ar
b) CH₄ < N₂ < Ar < C₂H₆
c) Ar < C₂H₆ < N₂ < CH₄
d) CH₄ < N₂ < C₂H₆ < Ar

Answers: 1. b; 2. d; 3. a; 4. c; 5. a; 6. d; 7. b; 8. d; 9. b; 10. a; 11. b; 12. d; 13. b; 14. b; 15. d

CHAPTER SUMMARY

10

REVIEW

MasteringChemistry™ provides end-of-chapter exercises, feedback-enriched tutorial problems, animations, and interactive activities to encourage problem solving practice and deeper understanding of key concepts and topics.

KEY LEARNING OUTCOMES

CHAPTER OBJECTIVES	ASSESSMENT
Convert between Pressure Units (10.3)	• Example 10.1 For Practice 10.1 For More Practice 10.1 Exercises 25–28
Relate Volume and Pressure: Boyle’s Law (10.4)	• Example 10.2 For Practice 10.2 Exercises 31, 32
Relate Volume and Temperature: Charles’s Law (10.4)	• Example 10.3 For Practice 10.3 Exercises 33, 34
Relate Volume and Moles: Avogadro’s Law (10.4)	• Example 10.4 For Practice 10.4 Exercises 35, 36
Determine <i>P</i> , <i>V</i> , <i>n</i> , or <i>T</i> Using the Ideal Gas Law (10.5)	• Examples 10.5, 10.6 For Practice 10.5, 10.6 For More Practice 10.6 Exercises 37–46, 51, 52
Relate the Density of a Gas to Its Molar Mass (10.6)	• Example 10.7 For Practice 10.7 For More Practice 10.7 Exercises 55, 56
Calculate the Molar Mass of a Gas with the Ideal Gas Law (10.6)	• Example 10.8 For Practice 10.8 Exercises 57–60
Calculate Total Pressure, Partial Pressures, and Mole Fractions of Gases in a Mixture (10.7)	• Examples 10.9, 10.10, 10.11 For Practice 10.9, 10.10, 10.11 Exercises 61, 62, 65, 67, 68, 70
Calculate the Root Mean Square Velocity of a Gas (10.8)	• Example 10.12 For Practice 10.12 Exercises 73, 74
Calculate the Effusion Rate or the Ratio of Effusion Rates of Two Gases (10.9)	• Example 10.13 For Practice 10.13 Exercises 75–78
Relate the Amounts of Reactants and Products in Gaseous Reactions: Stoichiometry (10.10)	• Examples 10.14, 10.15 For Practice 10.14, 10.15 For More Practice 10.14 Exercises 81–87

KEY TERMS

Section 10.1

pressure (415)

Section 10.2

kinetic molecular theory (416)

Section 10.3

millimeter of mercury (mmHg) (418)

barometer (418)

torr (418)

atmosphere (atm) (418)

pascal (Pa) (418)

manometer (419)

Section 10.4

Boyle's law (420)

Charles's law (423)

Avogadro's law (424)

Section 10.5

ideal gas law (426)

ideal gas (426)

ideal gas constant (426)

Section 10.6

molar volume (430)

standard temperature and pressure (STP) (430)

Section 10.7partial pressure (P_n) (433)

Dalton's law of partial pressures (433)

mole fraction (χ_a) (434)

hypoxia (435)

oxygen toxicity (436)

nitrogen narcosis (436)

vapor pressure (438)

Section 10.9

mean free path (443)

diffusion (443)

effusion (443)

Graham's law of effusion (443)

Section 10.11

van der Waals equation (449)

KEY CONCEPTS

Kinetic Molecular Theory (10.2)

- Kinetic molecular theory is a quantitative model of gas behavior. The theory has three main assumptions: (1) the gas particles are negligibly small; (2) the average kinetic energy of gas particles is proportional to the temperature in kelvins; and (3) the collision of one gas particle with another is completely elastic (the particles do not stick together). The gas laws all follow from the kinetic molecular theory.

Pressure (10.3)

- Gas pressure is the force per unit area that results from gas particles colliding with the surfaces around them. We use a variety of units to measure pressure, including mmHg, torr, Pa, psi, in Hg, and atm.

The Simple Gas Laws (10.4)

- The simple gas laws express relationships between pairs of variables when other variables are held constant. These variables correspond to the four basic properties of a gas sample: pressure (P), volume (V), temperature (T), and amount in moles (n).
- Boyle's law states that the volume of a gas is inversely proportional to its pressure.
- Charles's law states that the volume of a gas is directly proportional to its temperature.
- Avogadro's law states that the volume of a gas is directly proportional to the amount (in moles).

The Ideal Gas Law (10.5, 10.6)

- The ideal gas law, $PV = nRT$, relates the relationship among all four gas variables and contains the simple gas laws within it.
- We can use the ideal gas law to find one of the four variables if we know the other three. We can use it to calculate the molar volume of an ideal gas, which is 22.4 L at STP, and to calculate the density and molar mass of a gas.

Mixtures of Gases and Partial Pressures (10.7)

- In a mixture of gases, each gas acts independently of the others so that any overall property of the mixture is the sum of the properties of the individual components.
- The pressure due to any individual component is its partial pressure.

Molecular Velocities and Effusion (10.8, 10.9)

- We can use kinetic molecular theory to derive the expression for the root mean square velocity of gas particles. This velocity is inversely proportional to the molar mass of the gas, and therefore—at a given temperature—smaller gas particles (on average) move more quickly than larger ones.
- The kinetic molecular theory also allows us to predict the mean free path of a gas particle (the distance it travels between collisions) and relative rates of diffusion or effusion.

Gas Stoichiometry (10.10)

- In reactions involving gaseous reactants and products, we often report quantities in volumes at specified pressures and temperatures. We can convert these quantities to amounts (in moles) using the ideal gas law. Then we can use the stoichiometric coefficients from the balanced equation to determine the stoichiometric amounts of other reactants or products.
- The general form for these types of calculations is: volume A \longrightarrow amount A (in moles) \longrightarrow amount B (in moles) \longrightarrow quantity of B (in desired units).
- In cases where the reaction is carried out at STP, we can use the molar volume at STP (22.4 L = 1 mol) to convert between volume in liters and amount in moles.

Real Gases (10.11)

- Real gases, unlike ideal gases, do not always fit the assumptions of kinetic molecular theory.
- These assumptions tend to break down at high pressures, where the volume is higher than predicted for an ideal gas because the particles are no longer negligibly small compared to the space between them.
- The assumptions also break down at low temperatures where the pressure is lower than predicted because the attraction between molecules combined with low kinetic energies causes partially inelastic collisions.
- We can use the van der Waals equation to predict gas properties under nonideal conditions.

KEY EQUATIONS AND RELATIONSHIPS

Relationship between Pressure (P), Force (F), and Area (A) (10.3)

$$P = \frac{F}{A}$$

Boyle's Law: Relationship between Pressure (P) and Volume (V) (10.4)

$$V \propto \frac{1}{P}$$

$$P_1 V_1 = P_2 V_2$$

Charles's Law: Relationship between Volume (V) and Temperature (T) (10.4)

$$V \propto T \text{ (in K)}$$

$$\frac{V_1}{T_1} = \frac{V_2}{T_2}$$

Avogadro's Law: Relationship between Volume (V) and Amount in Moles (n) (10.4)

$$V \propto n$$

$$\frac{V_1}{n_1} = \frac{V_2}{n_2}$$

Ideal Gas Law: Relationship between Volume (V), Pressure (P), Temperature (T), and Amount (n) (10.5)

$$PV = nRT$$

Density of a Gas (10.6)

$$d = \frac{PM}{RT}$$

Dalton's Law: Relationship between Partial Pressures P_n in Mixture of Gases and Total Pressure (P_{total}) (10.7)

$$P_{\text{total}} = P_a + P_b + P_c + \dots$$

$$P_a = \frac{n_a RT}{V} \quad P_b = \frac{n_b RT}{V} \quad P_c = \frac{n_c RT}{V}$$

Mole Fraction (χ_a) (10.7)

$$\chi_a = \frac{n_a}{n_{\text{total}}}$$

$$P_a = \chi_a P_{\text{total}}$$

Average Kinetic Energy (KE_{avg}) (10.8)

$$KE_{\text{avg}} = \frac{3}{2}RT$$

Relationship between Root Mean Square Velocity (u_{rms}) and Temperature (T) (10.8)

$$u_{\text{rms}} = \sqrt{\frac{3RT}{M}}$$

Relationship of Effusion Rates of Two Different Gases (10.9)

$$\frac{\text{rate A}}{\text{rate B}} = \sqrt{\frac{M_B}{M_A}}$$

Van der Waals Equation: The Effects of Volume and Intermolecular Forces on Nonideal Gas Behavior (10.11)

$$[P + a(n/V)^2] \times (V - nb) = nRT$$

EXERCISES

REVIEW QUESTIONS

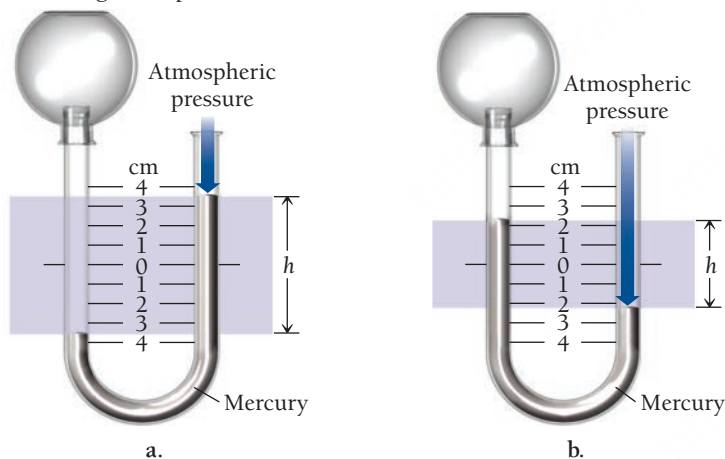
- What are the basic postulates of kinetic molecular theory? How does the concept of pressure follow from kinetic molecular theory?
- What is pressure? What causes pressure?
- How does pressure change as a function of altitude?
- Explain the risks associated with uncontrolled decompression.
- What are the common units of pressure? List them in order of smallest to largest unit.
- What is a manometer? How does it measure the pressure of a sample of gas?
- Summarize each of the simple gas laws (Boyle's law, Charles's law, and Avogadro's law). For each law, explain the relationship between the two variables it addresses and also state which variables must be kept constant.
- Explain the source of ear pain experienced due to a rapid change in altitude.
- Why must scuba divers never hold their breath as they ascend to the surface?
- Why is the second story of a house usually warmer than the ground story?
- Explain why hot-air balloons float above the ground.
- What is the ideal gas law? Why is it useful?
- Explain how the ideal gas law contains within it the simple gas laws (show an example).
- Define molar volume and give its value for a gas at STP.
- How does the density of a gas depend on temperature? Pressure? How does it depend on the molar mass of the gas?
- What is partial pressure? What is the relationship between the partial pressures of each gas in a sample and the total pressure of gas in the sample?
- Explain how Boyle's law, Charles's law, Avogadro's law, and Dalton's law all follow from kinetic molecular theory.
- Why do deep-sea divers breathe a mixture of helium and oxygen?
- When a gas is collected over water, is the gas pure? Why or why not? How can the partial pressure of the collected gas be determined?
- How is the kinetic energy of a gas related to temperature? How is the root mean square velocity of a gas related to its molar mass?
- Describe how perfume molecules travel from the bottle to your nose. What is mean free path?
- Explain the difference between diffusion and effusion. How is the effusion rate of a gas related to its molar mass?
- If a reaction occurs in the gas phase at STP, the mass of a product can be determined from the volumes of reactants. Explain.
- Deviations from the ideal gas law are often observed at high pressure and low temperature. Explain this in light of kinetic molecular theory.

PROBLEMS BY TOPIC

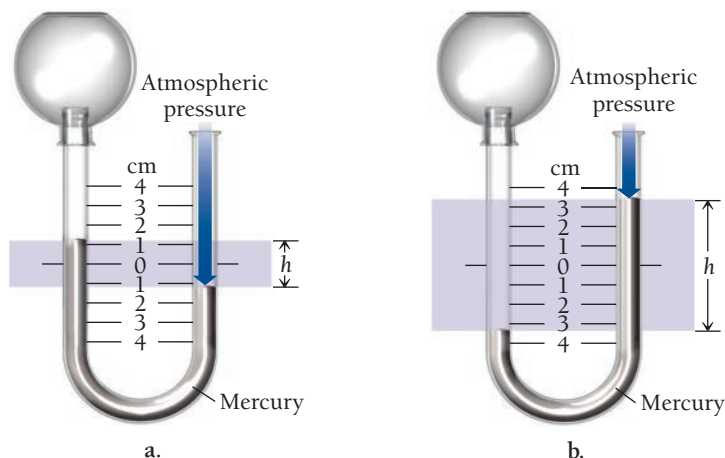
Note: Answers to all odd-numbered Problems, numbered in blue, can be found in Appendix III. Exercises in the Problems by Topic section are paired, with each odd-numbered problem followed by a similar even-numbered problem. Exercises in the Cumulative Problems section are also paired but more loosely. Because of their nature, Challenge Problems and Conceptual Problems are unpaired.

Converting between Pressure Units

25. The pressure in Denver, Colorado (elevation 5280 ft or 1600 m), averages about 24.9 in Hg. Convert this pressure to
a. atm b. mmHg c. psi d. Pa
26. The pressure on top of Mount Everest (29,029 ft or 8848 m) averages about 235 mmHg. Convert this pressure to
a. torr b. psi c. in Hg d. atm
27. The North American record for highest recorded barometric pressure is 31.85 in Hg, set in 1989 in Northway, Alaska. Convert this pressure to:
a. mmHg b. atm
c. torr d. kPa (kilopascals)
28. The world record for lowest pressure (at sea level) was 652.5 mmHg recorded inside Typhoon Tip on October 12, 1979, in the western Pacific Ocean. Convert this pressure to:
a. torr b. atm c. in Hg d. psi
29. If the barometric pressure is 762.4 mmHg, what is the pressure of the gas sample shown in each illustration?



30. If the barometric pressure is 751.5 mmHg, what is the pressure of the gas sample shown in each illustration?




Simple Gas Laws

31. A sample of gas has an initial volume of 5.6 L at a pressure of 735 mmHg. If the volume of the gas is increased to 9.4 L, what is its pressure?
32. A sample of gas has an initial volume of 13.9 L at a pressure of 1.22 atm. If the sample is compressed to a volume of 10.3 L, what is its pressure?
33. A 48.3-mL sample of gas in a cylinder is warmed from 22°C to 87°C. What is its volume at the final temperature?
34. A syringe containing 1.55 mL of oxygen gas is cooled from 95.3°C to 0.0°C. What is the final volume of oxygen gas?
35. A balloon contains 0.158 mol of gas and has a volume of 2.46 L. If we add 0.113 mol of gas to the balloon (at the same temperature and pressure), what is its final volume?
36. A cylinder with a moveable piston contains 0.553 mol of gas and has a volume of 253 mL. What is its volume if we add 0.365 mol of gas to the cylinder? (Assume constant temperature and pressure.)

Ideal Gas Law

37. What volume does 0.118 mol of helium gas at a pressure of 0.97 atm and a temperature of 305 K occupy? Would the volume be different if the gas was argon (under the same conditions)?
38. What volume does 12.5 g of argon gas at a pressure of 1.05 atm and a temperature of 322 K occupy? Would the volume be different if the sample were 12.5 g of helium (under identical conditions)?
39. What is the pressure in a 10.0-L cylinder filled with 0.448 mol of nitrogen gas at a temperature of 315 K?
40. What is the pressure in a 15.0-L cylinder filled with 32.7 g of oxygen gas at a temperature of 302 K?
41. A cylinder contains 28.5 L of oxygen gas at a pressure of 1.8 atm and a temperature of 298 K. How much gas (in moles) is in the cylinder?
42. What is the temperature of 0.52 mol of gas at a pressure of 1.3 atm and a volume of 11.8 L?
43. An automobile tire has a maximum rating of 38.0 psi (gauge pressure). The tire is inflated (while cold) to a volume of 11.8 L and a gauge pressure of 36.0 psi at a temperature of 12.0°C. When the car is driven on a hot day, the tire warms to 65.0°C and its volume expands to 12.2 L. Does the pressure in the tire exceed its maximum rating? (Note: The gauge pressure is the difference between the total pressure and atmospheric pressure. In this case, assume that atmospheric pressure is 14.7 psi.)
44. A weather balloon is inflated to a volume of 28.5 L at a pressure of 748 mmHg and a temperature of 28.0°C. The balloon rises in the atmosphere to an altitude of approximately 25,000 ft, where the pressure is 385 mmHg and the temperature is -15.0°C. Assuming the balloon can freely expand, calculate the volume of the balloon at this altitude.
45. A piece of dry ice (solid carbon dioxide) with a mass of 28.8 g sublimates (converts from solid to gas) into a large balloon. Assuming that all of the carbon dioxide ends up in the balloon, what is the volume of the balloon at a temperature of 22°C and a pressure of 742 mmHg?


46. A 1.0-L container of liquid nitrogen is kept in a closet measuring 1.0 m by 1.0 m by 2.0 m. Assuming that the container is completely full, that the temperature is 25.0°C, and that the atmospheric pressure is 1.0 atm, calculate the percent (by volume) of air that is displaced if all of the liquid nitrogen evaporates. (Liquid nitrogen has a density of 0.807 g/mL.)
47. A wine-dispensing system uses argon canisters to pressurize and preserve wine in the bottle. An argon canister for the system has a volume of 55.0 mL and contains 26.0 g of argon. Assuming ideal gas behavior, what is the pressure in the canister at 295 K? When the argon is released from the canister, it expands to fill the wine bottle. How many 750.0-mL wine bottles can be purged with the argon in the canister at a pressure of 1.20 atm and a temperature of 295 K?
48. Pressurized carbon dioxide inflators can be used to inflate a bicycle tire in the event of a flat. These inflators use metal cartridges that contain 16.0 g of carbon dioxide. At 298 K, to what gauge pressure (in psi) can the carbon dioxide in the cartridge inflate a 3.45-L mountain bike tire? (*Note:* The *gauge pressure* is the *difference* between the total pressure and atmospheric pressure. In this case, assume that atmospheric pressure is 14.7 psi.)
49. Which gas sample illustrated here has the greatest pressure? Assume that all the samples are at the same temperature. Explain.



a.



b.



c.

50. This picture represents a sample of gas at a pressure of 1 atm, a volume of 1 L, and a temperature of 25°C. Draw a similar picture showing what would happen to the sample if the volume were reduced to 0.5 L and the temperature were increased to 250°C. What would happen to the pressure?



51. Aerosol cans carry clear warnings against incineration because of the high pressures that can develop if they are heated. Suppose that a can contains a residual amount of gas at a pressure of 755 mmHg and a temperature of 25°C. What would the pressure be if the can were heated to 1155°C?
52. A sample of nitrogen gas in a 1.75-L container exerts a pressure of 1.35 atm at 25°C. What is the pressure if the volume of the container is maintained constant and the temperature is raised to 355°C?

Molar Volume, Density, and Molar Mass of a Gas

53. Use the molar volume of a gas at STP to determine the volume (in L) occupied by 33.6 g of neon at STP.
54. Use the molar volume of a gas at STP to calculate the density (in g/L) of nitrogen gas at STP.
55. What is the density (in g/L) of hydrogen gas at 20.0°C and a pressure of 1655 psi?
56. A sample of N₂O gas has a density of 2.85 g/L at 298 K. What is the pressure of the gas (in mmHg)?
57. A 248-mL gas sample has a mass of 0.433 g at a pressure of 745 mmHg and a temperature of 28°C. What is the molar mass of the gas?
58. A 113-mL gas sample has a mass of 0.171 g at a pressure of 721 mmHg and a temperature of 32°C. What is the molar mass of the gas?
59. A sample of gas has a mass of 38.8 mg. Its volume is 224 mL at a temperature of 55°C and a pressure of 886 torr. Find the molar mass of the gas.
60. A sample of gas has a mass of 0.555 g. Its volume is 117 mL at a temperature of 85°C and a pressure of 753 mmHg. Find the molar mass of the gas.

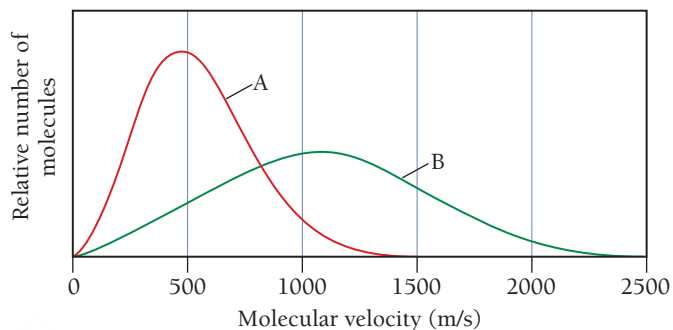
Partial Pressure

61. A gas mixture contains each of these gases at the indicated partial pressures: N₂, 215 torr; O₂, 102 torr; and He, 117 torr. What is the total pressure of the mixture? What mass of each gas is present in a 1.35-L sample of this mixture at 25.0°C?
62. A gas mixture with a total pressure of 745 mmHg contains each of these gases at the indicated partial pressures: CO₂, 125 mmHg; Ar, 214 mmHg; and O₂, 187 mmHg. The mixture also contains helium gas. What is the partial pressure of the helium gas? What mass of helium gas is present in a 12.0-L sample of this mixture at 273 K?
63. We add a 1.20-g sample of dry ice to a 755-mL flask containing nitrogen gas at a temperature of 25.0°C and a pressure of 725 mmHg. The dry ice sublimates (converts from solid to gas) and the mixture returns to 25.0°C. What is the total pressure in the flask?
64. A 275-mL flask contains pure helium at a pressure of 752 torr. A second flask with a volume of 475 mL contains pure argon at a pressure of 722 torr. If the two flasks are connected through a stopcock and the stopcock is opened, what is the partial pressure of each gas and the total pressure?
65. A gas mixture contains 1.25 g N₂ and 0.85 g O₂ in a 1.55-L container at 18°C. Calculate the mole fraction and partial pressure of each component in the gas mixture.

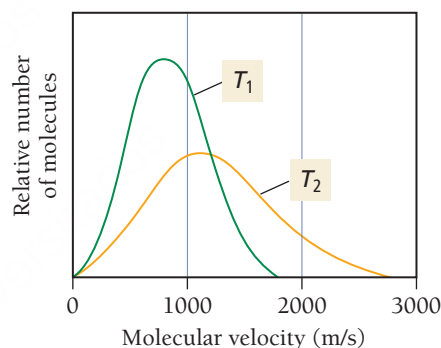
66. What is the mole fraction of oxygen gas in air (see Table 10.2)? What volume of air contains 10.0 g of oxygen gas at 273 K and 1.00 atm?
67. The hydrogen gas formed in a chemical reaction is collected over water at 30.0°C at a total pressure of 732 mmHg. What is the partial pressure of the hydrogen gas collected in this way? If the total volume of gas collected is 722 mL, what mass of hydrogen gas is collected?
68. The air in a bicycle tire is bubbled through water and collected at 25°C. If the total volume of gas collected is 5.45 L at a temperature of 25°C and a pressure of 745 torr, how many moles of gas were in the bicycle tire?
69. The zinc within a copper-plated penny will dissolve in hydrochloric acid if the copper coating is filed down in several spots (so that the hydrochloric acid can get to the zinc). The reaction between the acid and the zinc is $2\text{H}^+(\text{aq}) + \text{Zn}(\text{s}) \longrightarrow \text{H}_2(\text{g}) + \text{Zn}^{2+}(\text{aq})$. When the zinc in a certain penny dissolves, the total volume of gas collected over water at 25°C is 0.951 L at a total pressure of 748 mmHg. What mass of hydrogen gas is collected?
70. A heliox deep-sea diving mixture contains 2.0 g of oxygen to every 98.0 g of helium. What is the partial pressure of oxygen when this mixture is delivered at a total pressure of 8.5 atm?

Molecular Velocities and Effusion

71. Consider a 1.0-L sample of helium gas and a 1.0-L sample of argon gas, both at room temperature and atmospheric pressure.
- Do the atoms in the helium sample have the same *average kinetic energy* as the atoms in the argon sample?
 - Do the atoms in the helium sample have the same *average velocity* as the atoms in the argon sample?
 - Do the argon atoms, because they are more massive, exert a greater pressure on the walls of the container? Explain.
 - Which gas sample has the faster rate of effusion?
72. A flask at room temperature contains exactly equal amounts (in moles) of nitrogen and xenon.
- Which of the two gases exerts the greater partial pressure?
 - The molecules or atoms of which gas will have the greater average velocity?
 - The molecules of which gas will have the greater average kinetic energy?
 - If a small hole were opened in the flask, which gas would effuse more quickly?
73. Calculate the root mean square velocity and kinetic energy of F_2 , Cl_2 , and Br_2 at 298 K. Rank the three halogens with respect to their rate of effusion.
74. Calculate the root mean square velocity and kinetic energy of CO , CO_2 , and SO_3 at 298 K. Which gas has the greatest velocity? The greatest kinetic energy? The greatest effusion rate?
75. We obtain uranium-235 from U-238 by fluorinating the uranium to form UF_6 (which is a gas) and then taking advantage of the different rates of effusion and diffusion for compounds containing the two isotopes. Calculate the ratio of effusion rates for $^{238}\text{UF}_6$ and $^{235}\text{UF}_6$. The atomic mass of U-235 is 235.054 amu, and that of U-238 is 238.051 amu.
76. Calculate the ratio of effusion rates for Ar and Kr.
77. A sample of neon effuses from a container in 76 seconds. The same amount of an unknown noble gas requires 155 seconds. Identify the gas.
78. A sample of N_2O effuses from a container in 42 seconds. How long will it take the same amount of gaseous I_2 to effuse from the same container under identical conditions?
79. This graph shows the distribution of molecular velocities for two different molecules (A and B) at the same temperature. Which molecule has the higher molar mass? Which molecule has the higher rate of effusion?




80. This graph shows the distribution of molecular velocities for the same molecule at two different temperatures (T_1 and T_2). Which temperature is greater? Explain.



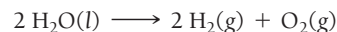
Reaction Stoichiometry Involving Gases

81. Consider the chemical reaction:



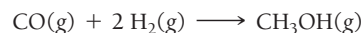
How many liters of hydrogen gas are formed from the complete reaction of 15.7 g C? Assume that the hydrogen gas is collected at a pressure of 1.0 atm and a temperature of 355 K.

82. Consider the chemical reaction:



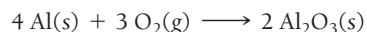
What mass of H_2O is required to form 1.4 L of O_2 at a temperature of 315 K and a pressure of 0.957 atm?

83. CH_3OH can be synthesized by the reaction:



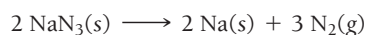
What volume of H_2 gas (in L), at 748 mmHg and 86°C, is required to synthesize 25.8 g CH_3OH ? How many liters of CO gas, measured under the same conditions, are required?

84. Oxygen gas reacts with powdered aluminum according to the reaction:



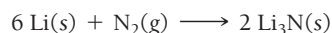
What volume of O_2 gas (in L), measured at 782 mmHg and 25°C, completely reacts with 53.2 g Al?

85. Automobile airbags inflate following serious impacts, which trigger the chemical reaction:



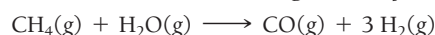
If an automobile airbag has a volume of 11.8 L, what mass of NaN_3 (in g) is required to fully inflate the airbag upon impact? Assume STP conditions.

86. Lithium reacts with nitrogen gas according to the reaction:




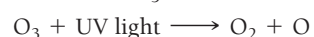
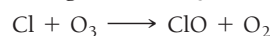
What mass of lithium (in g) reacts completely with 58.5 mL of N_2 gas at STP?

87. Hydrogen gas (a potential future fuel) can be formed by the reaction of methane with water according to the equation:



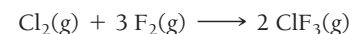
In a particular reaction, 25.5 L of methane gas (at a pressure of 732 torr and a temperature of 25°C) mixes with 22.8 L of water vapor (at a pressure of 702 torr and a temperature of 125°C). The reaction produces 26.2 L of hydrogen gas at STP. What is the percent yield of the reaction?

88. Ozone is depleted in the stratosphere by chlorine from CF_3Cl according to this set of equations:



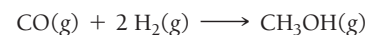
What total volume of ozone at a pressure of 25.0 mmHg and a temperature of 225 K is destroyed when all of the chlorine from 15.0 g of CF_3Cl goes through ten cycles of the above reactions?

89. Chlorine gas reacts with fluorine gas to form chlorine trifluoride:



A 2.00-L reaction vessel, initially at 298 K, contains chlorine gas at a partial pressure of 337 mmHg and fluorine gas at a partial pressure of 729 mmHg. Identify the limiting reactant and determine the theoretical yield of ClF_3 in grams.

90. Carbon monoxide gas reacts with hydrogen gas to form methanol:



A 1.50-L reaction vessel, initially at 305 K, contains carbon monoxide gas at a partial pressure of 232 mmHg and hydrogen gas at a partial pressure of 397 mmHg. Identify the limiting reactant and determine the theoretical yield of methanol in grams.

Real Gases

91. Which postulate of the kinetic molecular theory breaks down under conditions of high pressure? Explain.
92. Which postulate of the kinetic molecular theory breaks down under conditions of low temperature? Explain.
93. Use the van der Waals equation and the ideal gas equation to calculate the volume of 1.000 mol of neon at a pressure of 500.0 atm and a temperature of 355.0 K. Explain why the two values are different. (*Hint*: One way to solve the van der Waals equation for V is to use successive approximations. Use the ideal gas law to get a preliminary estimate for V .)

CUMULATIVE PROBLEMS

94. Use the van der Waals equation and the ideal gas equation to calculate the pressure exerted by 1.000 mol of Cl_2 in a volume of 5.000 L at a temperature of 273.0 K. Explain why the two values are different.

95. Pennies that are currently being minted are composed of zinc coated with copper. A student determines the mass of a penny to be 2.482 g and then makes several scratches in the copper coating (to expose the underlying zinc). The student puts the scratched penny in hydrochloric acid, where the following reaction occurs between the zinc and the HCl (the copper remains undissolved):



The student collects the hydrogen produced over water at 25°C . The collected gas occupies a volume of 0.899 L at a total pressure of 791 mmHg. Calculate the percent zinc (by mass) in the penny. (Assume that all the Zn in the penny dissolves.)

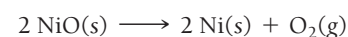
96. A 2.85-g sample of an unknown chlorofluorocarbon decomposes and produces 564 mL of chlorine gas at a pressure of 752 mmHg and a temperature of 298 K. What is the percent chlorine (by mass) in the unknown chlorofluorocarbon?
97. The mass of an evacuated 255-mL flask is 143.187 g. The mass of the flask filled with 267 torr of an unknown gas at 25°C is 143.289 g. Calculate the molar mass of the unknown gas.

98. A 118-mL flask is evacuated and found to have a mass of 97.129 g. When the flask is filled with 768 torr of helium gas at 35°C , it has a mass of 97.171 g. Is the helium gas pure?

99. A gaseous hydrogen- and carbon-containing compound is decomposed and found to contain 82.66% carbon and 17.34% hydrogen by mass. The mass of 158 mL of the gas, measured at 556 mmHg and 25°C , is 0.275 g. What is the molecular formula of the compound?

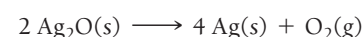
100. A gaseous hydrogen- and carbon-containing compound is decomposed and found to contain 85.63% C and 14.37% H by mass. The mass of 258 mL of the gas, measured at STP, is 0.646 g. What is the molecular formula of the compound?

101. Consider the reaction:



If O_2 is collected over water at 40.0°C and a total pressure of 745 mmHg, what volume of gas is collected for the complete reaction of 24.78 g of NiO ?

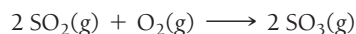
102. Consider the reaction:



If this reaction produces 15.8 g of $\text{Ag}(\text{s})$, what total volume of gas can be collected over water at a temperature of 25°C and a total pressure of 752 mmHg?

103. When hydrochloric acid is poured over potassium sulfide, 42.9 mL of hydrogen sulfide gas is produced at a pressure of 752 torr and 25.8°C. Write an equation for the gas-evolution reaction and determine how much potassium sulfide (in grams) reacted.

104. Consider the reaction:

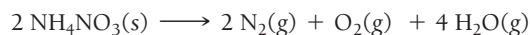


- a. If 285.5 mL of SO_2 reacts with 158.9 mL of O_2 (both measured at 315 K and 50.0 mmHg), what is the limiting reactant and the theoretical yield of SO_3 ?
b. If 187.2 mL of SO_3 is collected (measured at 315 K and 50.0 mmHg), what is the percent yield for the reaction?
105. Ammonium carbonate decomposes upon heating according to the balanced equation:




Calculate the total volume of gas produced at 22°C and 1.02 atm by the complete decomposition of 11.83 g of ammonium carbonate.

106. Ammonium nitrate decomposes explosively upon heating according to the balanced equation:

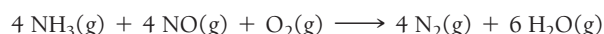


Calculate the total volume of gas (at 125°C and 748 mmHg) produced by the complete decomposition of 1.55 kg of ammonium nitrate.

107. Olympic cyclists fill their tires with helium to make them lighter. Calculate the mass of air in an air-filled tire and the mass of helium in a helium-filled tire. What is the mass difference between the two? Assume that the volume of the tire is 855 mL, that it is filled to a total pressure of 125 psi, and that the temperature is 25°C. Also, assume an average molar mass for air of 28.8 g/mol.
108. In a common classroom demonstration, a balloon is filled with air and submerged in liquid nitrogen. The balloon contracts as the gases within the balloon cool. Suppose a balloon initially contains 2.95 L of air at a temperature of 25.0°C and a pressure of 0.998 atm. Calculate the expected volume of the balloon upon cooling to -196°C (the boiling point of liquid nitrogen). When the demonstration is carried out, the actual volume of the balloon decreases to 0.61 L. How does the observed volume of the balloon compare to your calculated value? Explain the difference.

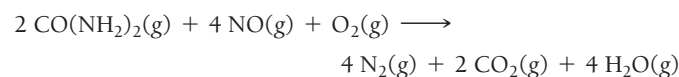


109. Gaseous ammonia is injected into the exhaust stream of a coal-burning power plant to reduce the pollutant NO to N_2 according to the reaction:



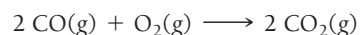
Suppose that the exhaust stream of a power plant has a flow rate of 335 L/s at a temperature of 955 K, and that the exhaust contains a partial pressure of NO of 22.4 torr. What should be the flow rate of ammonia delivered at 755 torr and 298 K into the stream to react completely with the NO if the ammonia is 65.2% pure (by volume)?

110. The emission of NO_2 by fossil fuel combustion can be prevented by injecting gaseous urea into the combustion mixture. The urea reduces NO (which oxidizes in air to form NO_2) according to the reaction:



Suppose that the exhaust stream of an automobile has a flow rate of 2.55 L/s at 655 K and contains a partial pressure of NO of 12.4 torr. What total mass of urea is necessary to react completely with the NO formed during 8.0 hours of driving?

111. An ordinary gasoline can measuring 30.0 cm by 20.0 cm by 15.0 cm is evacuated with a vacuum pump. Assuming that virtually all of the air can be removed from inside the can and that atmospheric pressure is 14.7 psi, what is the total force (in pounds) on the surface of the can? Do you think that the can will withstand the force?
112. Twenty-five milliliters of liquid nitrogen (density = 0.807 g/mL) is poured into a cylindrical container with a radius of 10.0 cm and a length of 20.0 cm. The container initially contains only air at a pressure of 760.0 mmHg (atmospheric pressure) and a temperature of 298 K. If the liquid nitrogen completely vaporizes, what is the total force (in lb) on the interior of the container at 298 K?
113. A 160.0-L helium tank contains pure helium at a pressure of 1855 psi and a temperature of 298 K. How many 3.5-L helium balloons will the helium in the tank fill? (Assume an atmospheric pressure of 1.0 atm and a temperature of 298 K.)
114. An 11.5-mL sample of liquid butane (density = 0.573 g/mL) is evaporated in an otherwise empty container at a temperature of 28.5°C. The pressure in the container following evaporation is 892 torr. What is the volume of the container?
115. A scuba diver creates a spherical bubble with a radius of 2.5 cm at a depth of 30.0 m where the total pressure (including atmospheric pressure) is 4.00 atm. What is the radius of the bubble when it reaches the surface of the water? (Assume that the atmospheric pressure is 1.00 atm and the temperature is 298 K.)
116. A particular balloon can be stretched to a maximum surface area of 1257 cm². The balloon is filled with 3.0 L of helium gas at a pressure of 755 torr and a temperature of 298 K. The balloon is then allowed to rise in the atmosphere. If the atmospheric temperature is 273 K, at what pressure will the balloon burst? (Assume the balloon is a sphere.)
117. A catalytic converter in an automobile uses a palladium or platinum catalyst (a substance that increases the rate of a reaction without being consumed by the reaction) to convert carbon monoxide gas to carbon dioxide according to the reaction:



A chemist researching the effectiveness of a new catalyst combines a 2.0 : 1.0 mole ratio mixture of carbon monoxide and oxygen gas (respectively) over the catalyst in a 2.45-L flask at a total pressure of 745 torr and a temperature of 552°C. When the reaction is complete, the pressure in the flask has dropped to 552 torr. What percentage of the carbon monoxide was converted to carbon dioxide?

118. A quantity of N_2 occupies a volume of 1.0 L at 300 K and 1.0 atm. The gas expands to a volume of 3.0 L as the result of a change in both temperature and pressure. Find the density of the gas at these new conditions.

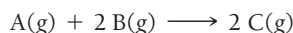
119. A mixture of CO(g) and $\text{O}_2\text{(g)}$ in a 1.0-L container at $1.0 \times 10^3 \text{ K}$ has a total pressure of 2.2 atm. After some time the total pressure falls to 1.9 atm as the result of the formation of CO_2 . Determine the mass (in grams) of CO_2 that forms.
120. The radius of a xenon atom is $1.3 \times 10^{-8} \text{ cm}$. A 100-mL flask is filled with Xe at a pressure of 1.0 atm and a temperature of 273 K. Calculate the fraction of the volume that is occupied by Xe atoms. (*Hint:* The atoms are spheres.)
121. A natural-gas storage tank is a cylinder with a moveable top whose volume can change only as its height changes. Its radius remains fixed. The height of the cylinder is 22.6 m on a day when the temperature is 22°C . The next day the height of the cylinder increases to 23.8 m when the gas expands because of a heat wave. Find the temperature on the second day, assuming that the pressure and amount of gas in the storage tank have not changed.
122. A mixture of 8.0 g CH_4 and 8.0 g Xe is placed in a container, and the total pressure is found to be 0.44 atm. Determine the partial pressure of CH_4 .
123. A steel container of volume 0.35 L can withstand pressures up to 88 atm before exploding. What mass of helium can be stored in this container at 299 K?
124. Binary compounds of alkali metals and hydrogen react with water to liberate $\text{H}_2\text{(g)}$. The H_2 from the reaction of a sample of NaH with an excess of water fills a volume of 0.490 L above the water. The temperature of the gas is 35°C , and the total pressure is 758 mmHg. Determine the mass of H_2 that was liberated and the mass of NaH that reacted.
125. In a given diffusion apparatus, 15.0 mL of HBr gas diffused in 1.0 min. In the same apparatus and under the same conditions, 20.3 mL of an unknown gas diffused in 1.0 min. The unknown gas is a hydrocarbon. Find its molecular formula.
126. A sample of $\text{N}_2\text{O}_3\text{(g)}$ has a pressure of 0.017 atm. The temperature (in K) is doubled, and the N_2O_3 undergoes complete decomposition to $\text{NO}_2\text{(g)}$ and NO(g) . Find the total pressure of the mixture of gases assuming constant volume and no additional temperature change.
127. When 0.583 g of neon is added to an 800- cm^3 bulb containing a sample of argon, the total pressure of the gases is 1.17 atm at a temperature of 295 K. Find the mass of the argon in the bulb.
128. A gas mixture composed of helium and argon has a density of 0.670 g/L at 755 mmHg and 298 K. What is the composition of the mixture by volume?
129. A gas mixture contains 75.2% nitrogen and 24.8% krypton by mass. What is the partial pressure of krypton in the mixture if the total pressure is 745 mmHg?

CHALLENGE PROBLEMS

130. A 10-L container is filled with 0.10 mol of $\text{H}_2\text{(g)}$ and heated to 3000 K, causing some of the $\text{H}_2\text{(g)}$ to decompose into H(g) . The total pressure is 3.0 atm. Find the partial pressure of the H(g) that forms from H_2 at this temperature. (Assume two significant figures for the temperature.)
131. A mixture of $\text{NH}_3\text{(g)}$ and $\text{N}_2\text{H}_4\text{(g)}$ is placed in a sealed container at 300 K. The total pressure is 0.50 atm. The container is heated to 1200 K, at which time both substances decompose completely according to the equations: $2 \text{NH}_3\text{(g)} \longrightarrow \text{N}_2\text{(g)} + 3 \text{H}_2\text{(g)}$; $\text{N}_2\text{H}_4\text{(g)} \longrightarrow \text{N}_2\text{(g)} + 2 \text{H}_2\text{(g)}$. After decomposition is complete, the total pressure at 1200 K is 4.5 atm. Find the percent of $\text{N}_2\text{H}_4\text{(g)}$ in the original mixture. (Assume two significant figures for the temperature.)
132. A quantity of CO gas occupies a volume of 0.48 L at 1.0 atm and 275 K. The pressure of the gas is lowered and its temperature is raised until its volume is 1.3 L. Determine the density of the CO under the new conditions.
133. When $\text{CO}_2\text{(g)}$ is put in a sealed container at 701 K and a pressure of 10.0 atm and is heated to 1401 K, the pressure rises to 22.5 atm. Some of the CO_2 decomposes to CO and O_2 . Calculate the mole percent of CO_2 that decomposes.
134. The world burns approximately $3.5 \times 10^{12} \text{ kg}$ of fossil fuel per year. Use the combustion of octane as the representative reaction and determine the mass of carbon dioxide (the most significant greenhouse gas) formed per year. The current concentration of carbon dioxide in the atmosphere is approximately 394 ppm (by volume). By what percentage does the concentration increase each year due to fossil fuel combustion? Approximate the average properties of the entire atmosphere by assuming that the atmosphere extends from sea level to 15 km and that it has an average pressure of 381 torr and average temperature of 275 K. Assume Earth is a perfect sphere with a radius of 6371 km.
135. The atmosphere slowly oxidizes hydrocarbons in a number of steps that eventually convert the hydrocarbon into carbon dioxide and water. The overall reaction of a number of such steps for methane gas is:
- $$\text{CH}_4\text{(g)} + 5 \text{O}_2\text{(g)} + 5 \text{NO(g)} \longrightarrow \text{CO}_2\text{(g)} + \text{H}_2\text{O(g)} + 5 \text{NO}_2\text{(g)} + 2 \text{OH(g)}$$
- Suppose that an atmospheric chemist combines 155 mL of methane at STP, 885 mL of oxygen at STP, and 55.5 mL of NO at STP in a 2.0-L flask. The flask stands for several weeks at 275 K. If the reaction reaches 90.0% of completion (90.0% of the limiting reactant is consumed), what is the partial pressure of each of the reactants and products in the flask at 275 K? What is the total pressure in the flask?
136. Two identical balloons are filled to the same volume, one with air and one with helium. The next day, the volume of the air-filled balloon has decreased by 5.0%. By what percent has the volume of the helium-filled balloon decreased? (Assume that the air is four-fifths nitrogen and one-fifth oxygen, and that the temperature did not change.)
137. A mixture of $\text{CH}_4\text{(g)}$ and $\text{C}_2\text{H}_6\text{(g)}$ has a total pressure of 0.53 atm. Just enough $\text{O}_2\text{(g)}$ is added to the mixture to bring about its complete combustion to $\text{CO}_2\text{(g)}$ and $\text{H}_2\text{O(g)}$. The total pressure of the two product gases is found to be 2.2 atm. Assuming constant volume and temperature, find the mole fraction of CH_4 in the mixture.
138. A sample of $\text{C}_2\text{H}_2\text{(g)}$ has a pressure of 7.8 kPa. After some time, a portion of it reacts to form $\text{C}_6\text{H}_6\text{(g)}$. The total pressure of the mixture of gases is then 3.9 kPa. Assume the volume and the temperature do not change. What fraction of $\text{C}_2\text{H}_2\text{(g)}$ has undergone reaction?

CONCEPTUAL PROBLEMS

139. When the driver of an automobile applies the brakes, the passengers are pushed toward the front of the car, but a helium balloon is pushed toward the back of the car. Upon forward acceleration, the passengers are pushed toward the back of the car, but the helium balloon is pushed toward the front of the car. Why?
140. Suppose that a liquid is 10 times denser than water. If you were to sip this liquid at sea level using a straw, what is the maximum length your straw can be?
141. The generic reaction occurs in a closed container:



- A reaction mixture initially contains 1.5 L of A and 2.0 L of B. Assuming that the volume and temperature of the reaction mixture remain constant, what is the percent change in pressure if the reaction goes to completion?
142. One mole of nitrogen and one mole of neon are combined in a closed container at STP. How big is the container?
143. Exactly equal amounts (in moles) of gas A and gas B are combined in a 1-L container at room temperature. Gas B has a molar mass that is twice that of gas A. Which statement is true for the mixture of gases and why?

- a. The molecules of gas B have greater kinetic energy than those of gas A.
- b. Gas B has a greater partial pressure than gas A.
- c. The molecules of gas B have a greater average velocity than those of gas A.
- d. Gas B makes a greater contribution to the average density of the mixture than gas A.
144. Which gas would you expect to deviate most from ideal behavior under conditions of low temperature: F_2 , Cl_2 , or Br_2 ? Explain.
145. The volume of a sample of a fixed amount of gas is decreased from 2.0 L to 1.0 L. The temperature of the gas in kelvins is then doubled. What is the final pressure of the gas in terms of the initial pressure?
146. Which gas sample has the greatest volume at STP?
- a. 10.0 g Kr b. 10.0 g Xe c. 10.0 g He
147. Draw a depiction of a gas sample, as described by kinetic molecular theory, containing equal molar amounts of helium, neon, and krypton. Use different color dots to represent each element. Give each atom a “tail” to represent its velocity relative to the others in the mixture.

QUESTIONS FOR GROUP WORK

Discuss these questions with the group and record your consensus answer.

148. Assign one of the three simple gas laws to each member of your group. For the assigned gas law, have each member write two equations, draw a graph, and describe it in a complete sentence. Have each group member present his or her law to the group.
149. Review the ideal gas law. Without referring back to the text, use algebra to write the ideal gas law and solve for each of the individual variables it contains. Have each group member solve for a different variable and present answers to the group.
150. Hydrogen peroxide (H_2O_2) decomposes in the presence of a catalyst to form water and oxygen. The catalyst is added to 5.00 mL of a hydrogen peroxide solution at 25.0 °C, and 49.5 mL of gas is collected over water at a total pressure of 763.8 mmHg.
- Write and balance the chemical reaction. (Note: catalysts do not appear in balanced chemical equations.)
 - Look up the vapor pressure of water under these conditions.
 - What is the partial pressure of oxygen collected over the water?
 - How many moles of oxygen are collected?

Active Classroom Learning

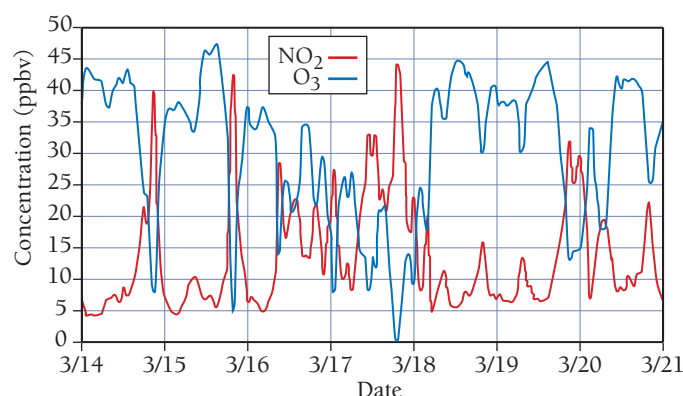
- e. How many grams of hydrogen peroxide were in the original sample?
- f. What is the concentration (in mol/L) of the hydrogen peroxide solution?
- g. Which part of this process is conceptually most difficult for your group?
151. A box contains equal amounts of helium, argon, and krypton (all gases) at 25 °C. Using complete sentences, describe the temperatures, masses, average velocities, and average kinetic energy of the three kinds of gas in the mixture. What do they have in common? What are the differences? How are these properties related?
152. Calculate the pressure exerted by 1 mol of an ideal gas in a box that is 0.500 L and at 298 K. Have each group member calculate the pressure of 1 mol of the following real gases in the same box at the same temperature: He, Ne, H_2 , CH_4 , and CO_2 using the van der Waals equation. Compare group members' answers and compare all answers with the pressure of an ideal gas. Assuming that the van der Waals equation predictions are accurate, account for why the pressure of each gas is higher or lower than that predicted for an ideal gas.

DATA INTERPRETATION AND ANALYSIS

153. When fuels are burned in air, such as in an automobile engine, some of the nitrogen in the air oxidizes to form nitrogen oxide gases such as NO and NO_2 (known collectively as NO_x). The U.S. Environmental Protection Agency (EPA) sets standards for air quality of several pollutants including NO_2 . According to the EPA, NO_2 levels in U.S. cities are not to exceed a yearly average of 53 ppb or a 1-hour average of 100 ppb. Another pollutant associated with

automobile exhaust is ozone (O_3). The EPA standard for ozone is an 8-hour average of 70 ppb. Breathing air with elevated levels of NO_2 or O_3 can cause asthma and other respiratory problems. The graph on the next page shows the average concentration of nitrogen dioxide (NO_2) and ozone (O_3) gases in units of parts per billion by volume (ppbv) over seven days in a large city.

Study the graph and answer the following questions:



▲ Concentration of NO₂ and O₃ over Seven Days

Source: <http://www.cas.manchester.ac.uk/resprojects/holmemoss/results/fig2/>

- What type of relationship exists between nitrogen dioxide and ozone between March 14 and March 16?
- Calculate the number of moles of NO₂ in 1.00 m³ produced on March 14. Assume an average temperature of 25.0 °C and a

pressure of 1 atm. Note that the number of moles of NO₂ produced is the difference between the existing amount at the start of the day and the peak amount.

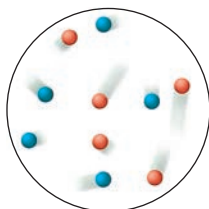
- Calculate the number of moles of O₃ in 1.00 m³ consumed on March 14. Assume an average temperature of 25.0 °C and a pressure of 1 atm. Note that the number of moles of O₃ consumed is the difference between the existing amount at the start of the day and the minimum amount.
- What is the mole-to-mole ratio of O₃ consumed to NO₂ produced?
- The following chemical equations model the interactions of nitrogen dioxide gas and ozone gas. Can this set of equations account for the trends observed in the graph? Explain your answer.

$$\text{N}_2 + \text{O}_2 \longrightarrow 2\text{NO}$$

$$\text{NO} + \text{O}_3 \longrightarrow \text{NO}_2 + \text{O}_2 + \text{light}$$
- Do the concentrations of NO₂ or O₃ represented in the graph exceed the standards set by the EPA?

ANSWERS TO CONCEPTUAL CONNECTIONS

- Cc 10.1 Although the velocity “tails” of each atom will have different lengths, the average length of the tails on the argon atoms in your drawing should be longer than the average length of the tails on the xenon atoms. Because the argon atoms are lighter, they must on average move faster than the xenon atoms to have the same kinetic energy.



- Cc 10.2 (e) The final volume of the gas is the same as the initial volume because doubling the pressure *decreases* the volume by a factor of 2, but doubling the temperature *increases* the volume by a factor of 2. The two changes in volume are equal in magnitude but opposite in sign, resulting in a final volume that is equal to the initial volume.
- Cc 10.3 (a) Because 1 g of H₂ contains the greatest number of moles (due to H₂ having the lowest molar mass of the listed gases), and 1 mol of *any* ideal gas occupies the same volume, the H₂ occupies the greatest volume.

- Cc 10.4 Ne < O₂ < F₂ < Cl₂; Because each gas occupies the same volume at STP (assuming ideal behavior), the densities increase with increasing molar mass.
- Cc 10.5 P_{He} = 1.5 atm; P_{Ne} = 1.5 atm. Because the number of moles of each gas are equal, the mole fraction of each gas is 0.50 and the partial pressure of each gas is simply 0.50 × P_{tot}.
- Cc 10.6 (c) Because the temperature and the volume are both constant, the ideal gas law tells us that the pressure depends solely on the number of particles. Sample (c) has the greatest number of particles per unit volume and therefore has the greatest pressure. The pressures of samples (a) and (b) at a given temperature are identical. Even though the particles in (b) are more massive than those in (a), they have the same average kinetic energy at a given temperature. The particles in (b) move more slowly than those in (a) and therefore exert the same pressure as the particles in (a).
- Cc 10.7 (b) Because the total number of gas molecules decreases, the total pressure—the sum of all the partial pressures—must also decrease.
- Cc 10.8 A < B < C. Curve A is the lowest temperature curve because it deviates the most from ideality. The tendency for the intermolecular forces in carbon dioxide to lower the pressure (relative to that of an ideal gas) is greatest at low temperature (because the molecules are moving more slowly and are therefore less able to overcome the intermolecular forces). As a result, the curve that dips the lowest must correspond to the lowest temperature.

11.1 Water, No Gravity 463

11.2 Solids, Liquids, and Gases: A Molecular Comparison 464

11.3 Intermolecular Forces: The Forces That Hold Condensed States Together 466

11.4 Intermolecular Forces in Action: Surface Tension, Viscosity, and Capillary Action 476

11.5 Vaporization and Vapor Pressure 478

11.6 Sublimation and Fusion 487

11.7 Heating Curve for Water 489

11.8 Phase Diagrams 491

11.9 Water: An Extraordinary Substance 494

Key Learning Outcomes 497



On the space station, astronauts live in the absence of gravity. A sample of spilled water in the absence of gravity forms a perfect sphere. This behavior is a direct result of intermolecular forces—attractive forces that exist among the particles that compose matter.

CHAPTER

11

Liquids, Solids, and Intermolecular Forces

RECALL FROM CHAPTER 1 that matter exists primarily in three states (or phases): solid, liquid, and gas. In Chapter 10, we examined the gas state. In this chapter and the next, we turn to the liquid and solid states, known collectively as the *condensed* states. The liquid and solid states are more similar to each other than they are to the gas state. In the gas state, constituent particles—atoms or molecules—are separated by large distances and do not interact with each other very much. In the condensed states, constituent particles are close together and exert moderate to strong attractive forces on one another. Whether a substance is a solid, liquid, or gas depends on the structure of the particles that compose the substance. Remember the theme we have emphasized since Chapter 1 of this book: The properties of matter are determined by the properties of the particles that compose it. In this chapter, we will consider how the structure of a particular atom or molecule determines its state at a given temperature.

“It’s a wild dance floor there at the molecular level.”

—Roald Hoffmann (1937–)

11.1 Water, No Gravity

In the space station, water won’t spill. When an astronaut squeezes a full water bottle, the water squirts out like it does on Earth, but instead of falling to the floor and forming a puddle, the water molecules stick together to form a floating, oscillating blob. Over time, the blob stops oscillating and forms a nearly perfect sphere. Why?

The reason is the main topic of this chapter: *intermolecular forces*, the attractive forces that exist among the particles that compose matter. The water molecules that compose water are attracted to one another, much like a collection of small magnets are attracted to each other. These attractions hold the water molecules together as a liquid (instead of a gas) at room temperature.

These forces also cause samples of water to clump together into a blob, which is clearly seen in the absence of gravity. Over time irregularities in the shape of the blob smooth out, and the blob becomes a sphere. The sphere is the geometrical shape with the lowest surface area to volume ratio. By forming a sphere, the water molecules maximize their interaction with one another because the sphere results in the minimum number of molecules being at the surface of the liquid, where fewer interactions occur (compared to the interior of the liquid).



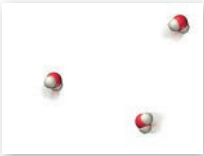
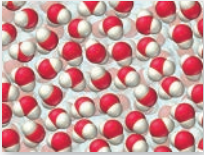

Intermolecular forces exist, not only among water molecules, but among all particles that compose matter. You can see the effect of these attractive forces in this image, which shows an astronaut touching a floating blob of water in the absence of gravity.

Notice how the water sticks to the astronaut’s finger. The water molecules experience an attractive force to the molecules that compose skin. This attractive force deforms the entire blob of water. *Intermolecular forces exist among all the particles that compose matter.*

Intermolecular forces are responsible for the very existence of condensed states. The state of a sample of matter—solid, liquid, or gas—depends on the magnitude of intermolecular forces among the constituent particles relative to the amount of thermal energy in the sample. The molecules and atoms composing matter are in constant random motion that increases with increasing temperature. The energy associated with this motion is *thermal energy*. When thermal energy is high relative to intermolecular forces, matter tends to be gaseous. When thermal energy is low relative to intermolecular forces, matter tends to be liquid or solid.

11.2 Solids, Liquids, and Gases: A Molecular Comparison

We are all familiar with solids, liquids, and gases. Water, gasoline, rubbing alcohol, and nail polish remover are common liquids. Ice, dry ice, and diamond are familiar solids. Oxygen, nitrogen, and helium are common gases. To begin to understand the differences between the three common states of matter, examine Table 11.1, which shows the density and molar volume of water in its three different states, along with molecular representations of each state. Notice that the densities of the solid and liquid states are much greater than the density of the gas state. Notice also that the solid and liquid states are more similar in density and molar volume to one another than they are to the gas state. The molecular representations show the reason for these differences. The molecules in liquid water and ice are in close contact with one another—essentially touching—while those in gaseous water are separated by large distances. The molecular representation of gaseous water in Table 11.1 is actually out of proportion—the water molecules in the figure should be much farther apart given their size. (Only a fraction of a molecule could be included in the table if it were drawn to scale.) From the molar volumes, we know that 18.0 mL of liquid water (slightly more than a tablespoon) occupies 30.5 L when converted to gas at -100°C (at atmospheric pressure). The low density of gaseous water is a direct result of this large separation between molecules.

TABLE 11.1 The Three States of Water				
Phase	Temperature (°C)	Density (g/cm ³ , at 1 atm)	Molar Volume	Molecular View
Gas (steam)	100	5.90×10^{-4}	30.5 L	
Liquid (water)	20	0.998	18.0 mL	
Solid (ice)	0	0.917	19.6 mL	

Notice also that solid water is slightly less dense than liquid water. This is *atypical* behavior. Most solids are slightly more dense than their corresponding liquids because the molecules move closer together upon freezing. As we will discuss in Section 11.9, ice is less dense than liquid water because the unique crystal structure of ice results in water molecules moving slightly farther apart upon freezing.

Properties of the States of Matter

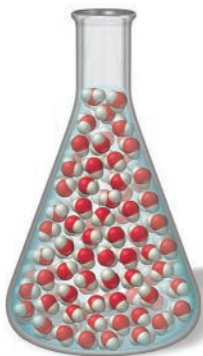
A major difference between liquids and solids is the freedom of movement of the constituent molecules or atoms. Even though the atoms or molecules in a liquid are in close contact, thermal energy partially overcomes the attractions between them, allowing them to move around one another. This is not the case in solids; the atoms or molecules in a solid are virtually locked in their positions, only vibrating back and forth about a fixed point. Table 11.2 summarizes the properties of liquids and solids, as well as the properties of gases for comparison.

TABLE 11.2 Properties of the States of Matter

State	Density	Shape	Volume	Strength of Intermolecular Forces (Relative to Thermal Energy)
Gas	Low	Indefinite	Indefinite	Weak
Liquid	High	Indefinite	Definite	Moderate
Solid	High	Definite	Definite	Strong

Liquids assume the shape of their containers because the atoms or molecules that compose liquids are free to flow (or move around one another). When we pour water into a beaker, the water flows and assumes the shape of the beaker (Figure 11.1 ►). Liquids are not easily compressed because the molecules or atoms that compose them are already in close contact—they cannot be pushed much closer together. The molecules in a gas, by contrast, have a great deal of space between them and are easily forced into a smaller volume by an increase in external pressure (Figure 11.2 ▼).

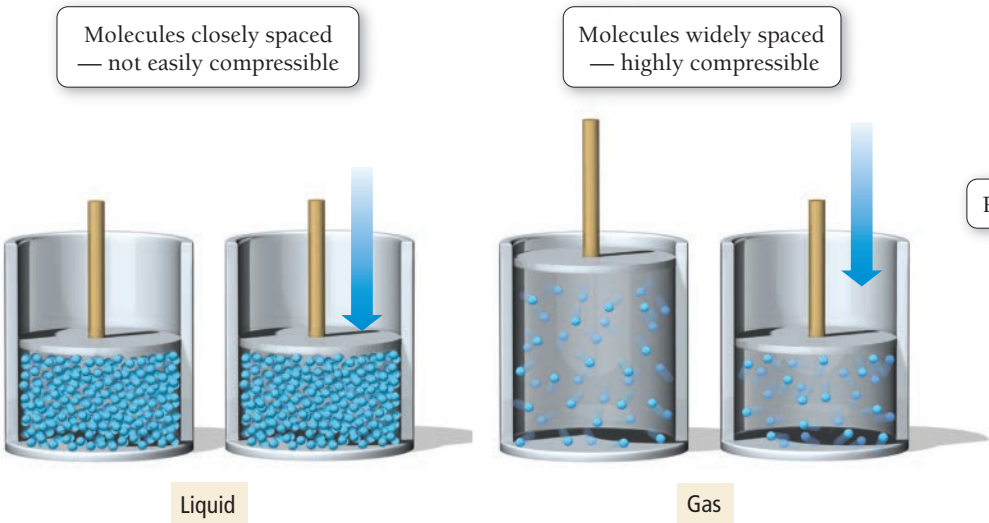
The definite shape of solids is due to the relative immobility of their atoms or molecules. Like liquids, solids have a definite volume and generally cannot be compressed because the molecules or atoms composing them are already in close contact. Solids may be **crystalline**, in which case the atoms or molecules that compose them are arranged in a well-ordered three-dimensional array, or they may be **amorphous**, in which case the atoms or molecules that compose them have no long-range order (Figure 11.3 ▼).



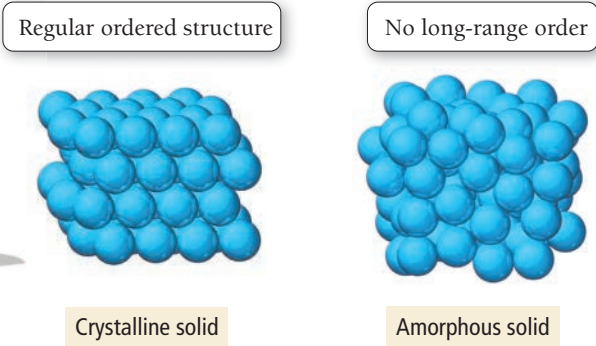
Molecules in liquid are free to flow and assume the shape of a container.

▲ FIGURE 11.1 Liquids Assume the Shapes of Their Containers

According to some definitions, an amorphous solid is a unique state, different from the normal solid state because it lacks any long-range order.



▲ FIGURE 11.2 Gases Are Compressible



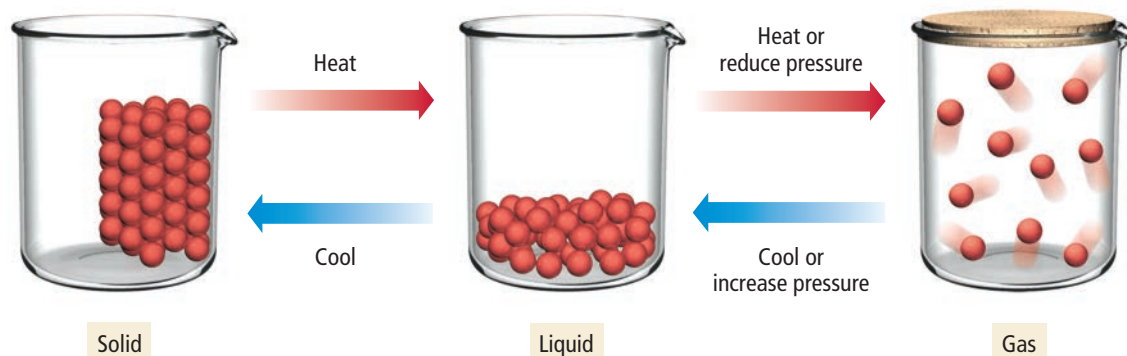
▲ FIGURE 11.3 Crystalline and Amorphous Solids

Changes between States

We can transform one state of matter to another by changing the temperature, pressure, or both. For example, we convert solid ice to liquid water by heating, and liquid water to solid ice by cooling. The following diagram shows the three states of matter and the changes in conditions that commonly induce transitions between the states.



▲ The propane in an LP gas tank is in the liquid state. When you open the tank, some propane vaporizes and escapes as a gas.



We can induce a transition between the liquid and gas state, not only by heating and cooling, but also by changing the pressure. In general, increases in pressure favor the denser state, so increasing the pressure of a gas sample results in a transition to the liquid state. A familiar example of this phenomenon occurs in the LP (liquefied petroleum) gas used as a fuel for outdoor grills and lanterns. LP gas is composed primarily of propane, a gas at room temperature and atmospheric pressure. However, it liquefies at pressures exceeding about 2.7 atm. The propane you buy in a tank is under pressure and therefore in the liquid form. When you open the tank, some of the propane escapes as a gas, lowering the pressure in the tank for a brief moment. Immediately, however, some of the liquid propane evaporates, replacing the gas that escaped. Storing gases like propane as liquids is efficient because, in their liquid form, they occupy much less space.

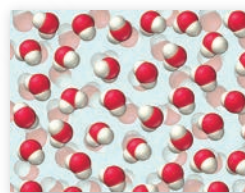
PEARSON
eText
2.0

11.1
Cc

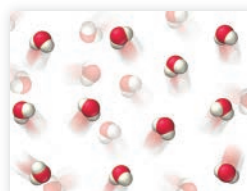
Conceptual
Connection

State Changes

This molecular diagram shows a sample of liquid water.



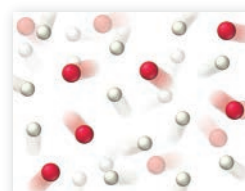
Which of these diagrams best depicts the vapor emitted from a pot of boiling water?



(a)



(b)



(c)

PEARSON
eText
2.0

KEY CONCEPT VIDEO
Intermolecular Forces

11.3 Intermolecular Forces: The Forces That Hold Condensed States Together

The structure of the particles that compose a substance determines the strength of the intermolecular forces that hold the substance together, which in turn determine whether the substance is a solid, liquid,

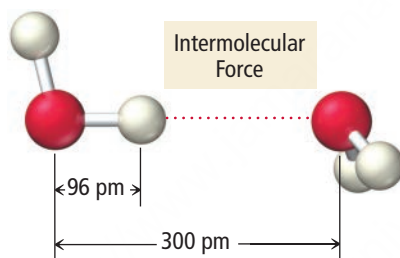
or gas at a given temperature. At room temperature, moderate to strong intermolecular forces tend to result in liquids and solids (high melting and boiling points), and weak intermolecular forces tend to result in gases (low melting and boiling points).

Intermolecular forces originate from the interactions between charges, partial charges, and temporary charges on molecules (or atoms and ions), much as bonding forces originate from interactions between charged particles in atoms. Recall from Section 4.3 that according to Coulomb's law, the potential energy (E) of two oppositely charged particles (with charges q_1 and q_2) decreases (becomes more negative) with increasing magnitude of charge and with decreasing separation (r).

$$E = \frac{1}{4\pi\epsilon_0} \frac{q_1 q_2}{r} \quad (\text{When } q_1 \text{ and } q_2 \text{ are opposite in sign, } E \text{ is negative.})$$

Therefore, as we have seen, protons and electrons are attracted to each other because their potential energy decreases as they get closer together. Similarly, molecules with partial or temporary charges are attracted to each other because *their* potential energy decreases as they get closer together. However, intermolecular forces, even the strongest ones, are generally *much weaker* than bonding forces.

The reason intermolecular forces are relatively weak compared to bonding forces is also related to Coulomb's law. Bonding forces are the result of large charges (the charges on protons and electrons) interacting at very close distances. Intermolecular forces are the result of smaller charges (as we shall see in the following discussion) interacting at greater distances. For example, consider the interaction between two water molecules in liquid water:

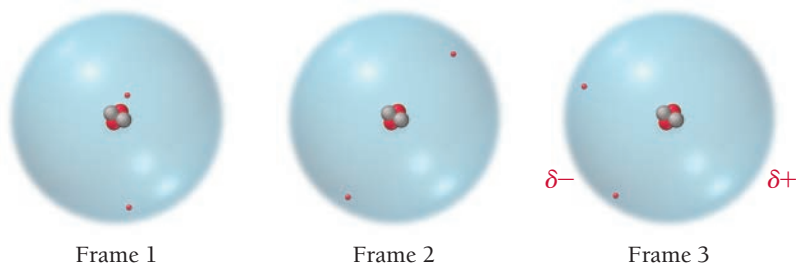


The length of an O—H bond in liquid water is 96 pm; however, the average distance between water molecules in liquid water is about 300 pm. The larger distances between molecules, as well as the smaller charges involved (the partial charges on the hydrogen and oxygen atoms), result in weaker forces. To break the O—H bonds in water, we have to heat the water to thousands of degrees Celsius. However, to completely overcome the intermolecular forces *between* water molecules, we have to heat water only to its boiling point, 100°C (at sea level).

In this section, we examine several different types of intermolecular forces, including dispersion forces, dipole–dipole forces, hydrogen bonding, and ion–dipole forces. The first three of these can potentially occur in all substances; the last one occurs only in mixtures.

Dispersion Force

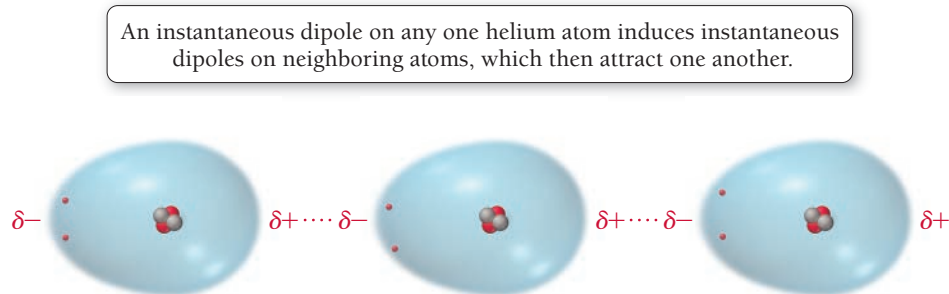
The intermolecular force present in all molecules and atoms is the **dispersion force** (also called the London force). Dispersion forces are the result of fluctuations in the electron distribution within molecules or atoms. Because all atoms and molecules have electrons, they all exhibit dispersion forces. The electrons in an atom or molecule may, *at any one instant*, be unevenly distributed. Imagine a frame-by-frame movie of a helium atom in which each “frame” captures the position of the helium atom’s two electrons.



The nature of dispersion forces was first recognized by Fritz W. London (1900–1954), a German American physicist.

► **FIGURE 11.4 Dispersion**

Interactions The temporary dipole in one helium atom induces a temporary dipole in its neighbor. The resulting attraction between the positive and negative charges creates the dispersion force.

Dispersion Force

In any one frame, the electrons may not be symmetrically arranged around the nucleus. In frame 3, for example, helium's two electrons are on the left side of the helium atom. At that instant, the left side of the atom will have a slightly negative charge (δ^-). The right side of the atom, which temporarily has no electrons, will have a slightly positive charge (δ^+) because of the charge of the nucleus. This fleeting charge separation is called an *instantaneous dipole* or a *temporary dipole*. As shown in **Figure 11.4** ▲, an instantaneous dipole on one helium atom induces an instantaneous dipole on its neighboring atoms because the positive end of the instantaneous dipole attracts electrons in the neighboring atoms. The neighboring atoms then attract one another—the positive end of one instantaneous dipole attracting the negative end of another. This attraction is the dispersion force.

To polarize means to form a dipole moment (see Section 5.2).

The *magnitude* of the dispersion force depends on how easily the electrons in the atom or molecule move or *polarize* in response to an instantaneous dipole, which in turn depends on the size (or volume) of the electron cloud. A larger electron cloud results in a greater dispersion force because the electrons are held less tightly by the nucleus and therefore polarize more easily. If all other variables are constant, the dispersion force increases with increasing molar mass because molecules or atoms of higher molar mass generally have

more electrons dispersed over a greater volume. We can see evidence for the increase in dispersion force with increasing molar mass by examining the boiling points of the noble gases in Table 11.3. Boiling points generally increase with increasing strength of intermolecular forces because more thermal energy is required to separate the particles from the liquid state into the gas state when those particles are more strongly attracted to one another. Notice in Table 11.3 that as the molar masses and electron cloud volumes of the noble gases increase, greater dispersion forces result in higher boiling points.

Molar mass alone, however, does not determine the magnitude of the dispersion force. Compare the molar masses and boiling points of *n*-pentane and neopentane:



***n*-Pentane**
molar mass = 72.15 g/mol
boiling point = 36.1 °C



Neopentane
molar mass = 72.15 g/mol
boiling point = 9.5 °C

TABLE 11.3 Boiling Points of the Noble Gases

Noble Gas	Molar Mass (g/mol)	Boiling Point (K)
He	4.00	4.2
Ne	20.18	27
Ar	39.95	87
Kr	83.80	120
Xe	131.30	165

These molecules have identical molar masses (they are isomers), but *n*-pentane has a higher boiling point than neopentane. Why? Because the two molecules have different structures. The *n*-pentane molecules are long and can interact with one another along their entire length, as shown in **Figure 11.5(a)** ►.

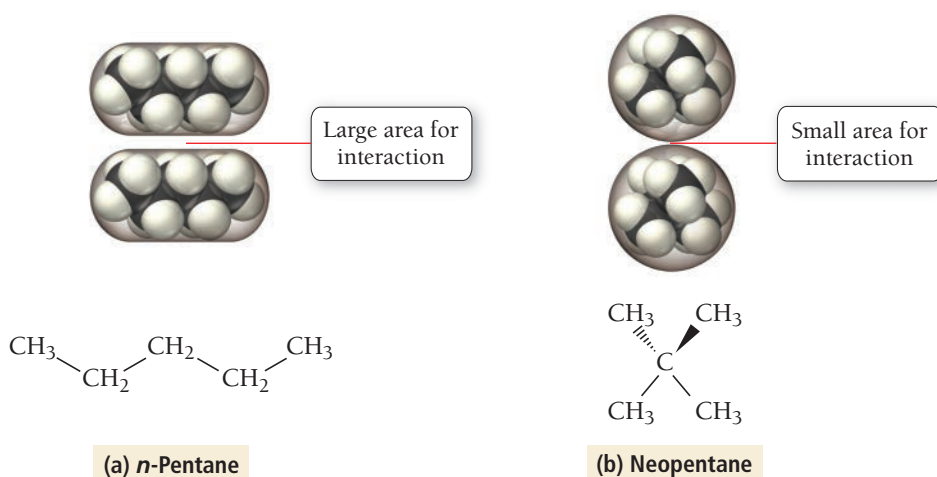


FIGURE 11.5 Dispersion Force and Molecular Shape (a) The straight shape of *n*-pentane molecules allows them to interact with one another along the entire length of the molecules. (b) The nearly spherical shape of neopentane molecules allows for only a small area of interaction. Thus, dispersion forces are weaker in neopentane than in *n*-pentane, resulting in a lower boiling point.

In contrast, the bulky, round shape of neopentane molecules results in a smaller area of interaction between neighboring molecules, as shown in **Figure 11.5(b)**. The result is a lower boiling point for neopentane.

Although molecular shape and other factors must always be considered in determining the magnitude of dispersion forces, molar mass can act as a guide when we are comparing dispersion forces within a family of similar elements or compounds, as shown in **Figure 11.6**.

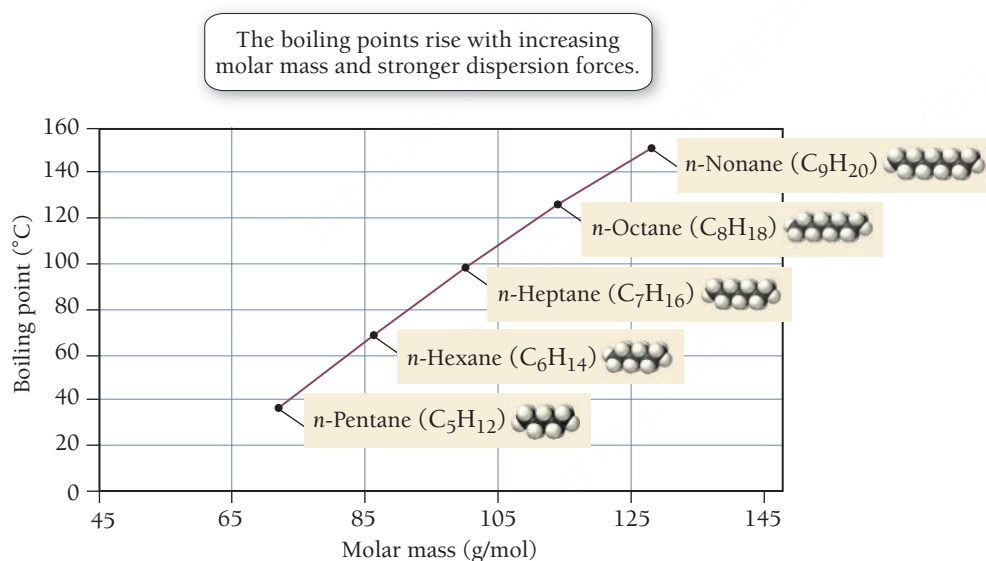


FIGURE 11.6 Boiling Points of the *n*-Alkanes

Dispersion Forces

11.2
Cc

Conceptual
Connection

PEARSON
eText
2.0

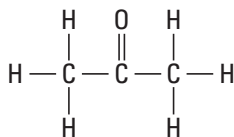
Which halogen has the highest boiling point?

- (a) Cl₂
- (b) Br₂
- (c) I₂

See Section 5.10 to review how to determine if a molecule is polar.

Dipole–Dipole Force

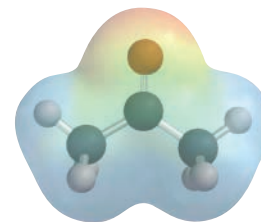
The **dipole–dipole force** exists in all molecules that are polar. Polar molecules have electron-rich regions (which have a partial negative charge) and electron-deficient regions (which have a partial positive charge). For example, consider acetone:



Structural formula



Space-filling model

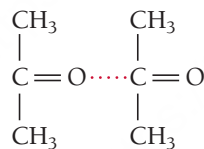


Electrostatic potential map


The image on the right is an electrostatic potential map of acetone; these kinds of maps were first introduced in Chapter 5 (see Section 5.10). Recall that the red areas indicate electron-rich regions in the molecule and that the blue areas indicate electron-poor regions. Acetone has an electron-rich region surrounding the oxygen atom (because oxygen is more electronegative than the rest of the molecule) and electron-poorer regions surrounding the carbon and hydrogen atoms. The result is that acetone has a **permanent dipole** that can interact with other acetone molecules, as shown in **Figure 11.7** ▼.

Dipole–Dipole Interaction

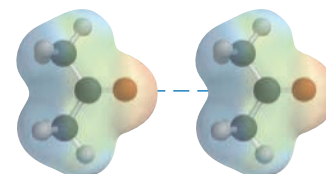
The positive end of a polar molecule is attracted to the negative end of its neighbor.



Structural formula



Space-filling model





Electrostatic potential map

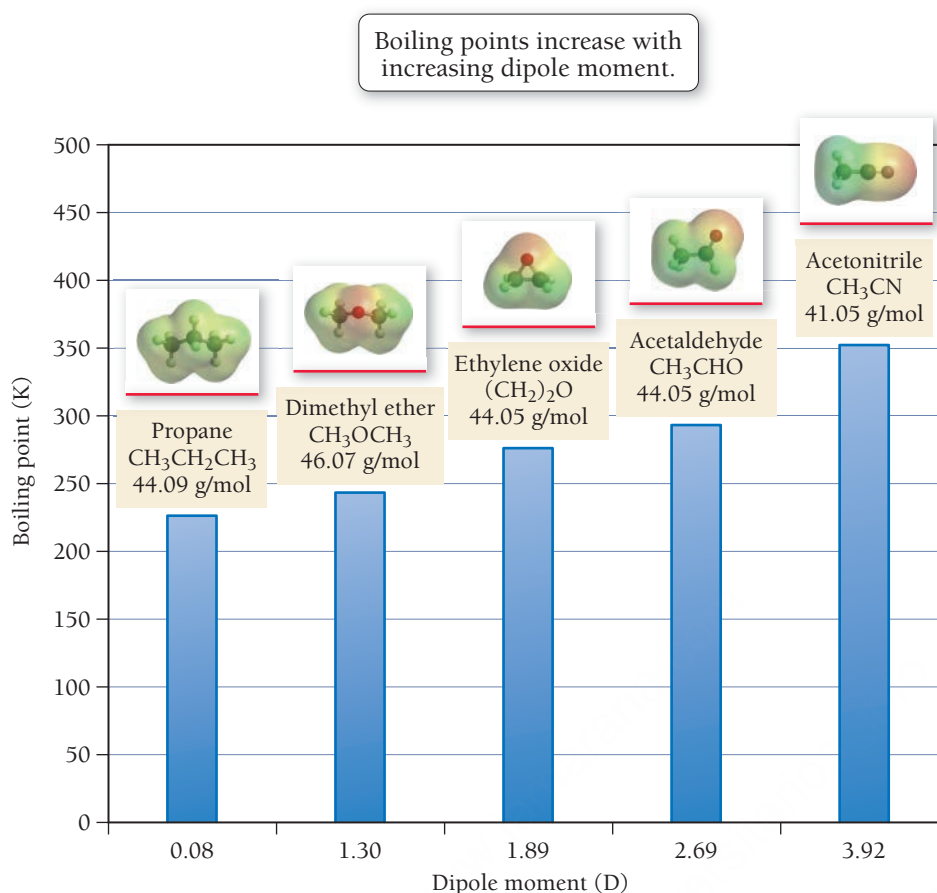
► **FIGURE 11.7 Dipole–Dipole Interaction** Molecules with permanent dipoles, such as acetone, are attracted to one another via dipole–dipole interactions.

The positive end of one permanent dipole attracts the negative end of another; this attraction is the dipole–dipole force. Polar molecules, therefore, have higher melting and boiling points than nonpolar molecules of similar molar mass. Remember that all molecules (including polar ones) have dispersion forces. *In addition*, polar molecules have dipole–dipole forces. This additional attractive force raises their melting and boiling points relative to nonpolar molecules of similar molar mass.

For example, consider formaldehyde and ethane.

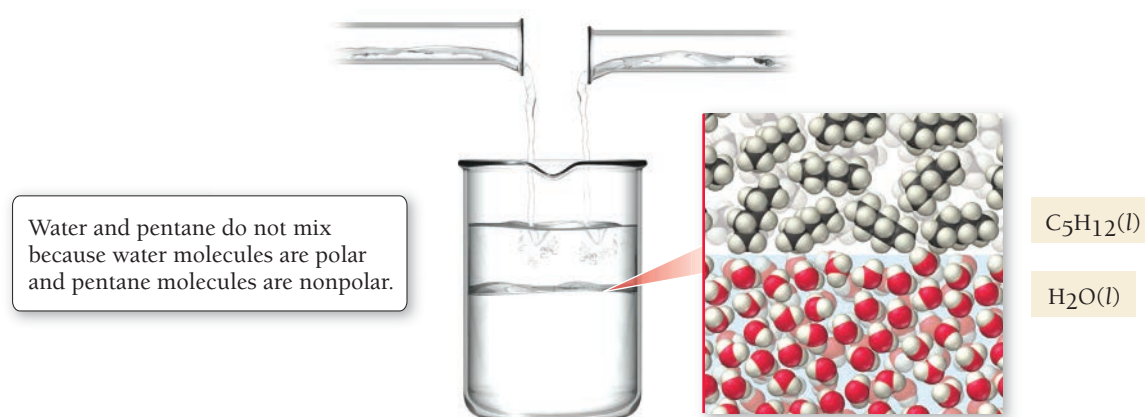
Name	Formula	Molar Mass (amu)	Structure	bp (°C)	mp (°C)
Formaldehyde	CH ₂ O	30.03	$\begin{array}{c} \text{O} \\ \\ \text{H}-\text{C}-\text{H} \end{array}$ 	−19.5	−92
Ethane	C ₂ H ₆	30.07	$\begin{array}{c} \text{H} & \text{H} \\ & \\ \text{H}-\text{C}-\text{C}-\text{H} \\ & \\ \text{H} & \text{H} \end{array}$ 	−88	−172

◀ **FIGURE 11.8 Dipole Moment and Boiling Point**



Formaldehyde is polar and has a higher melting point and boiling point than nonpolar ethane, even though the two compounds have the same molar mass. **Figure 11.8** ▲ shows the boiling points of a series of molecules with similar molar mass but progressively greater dipole moments. Notice that the boiling points increase with increasing dipole moment.

The polarity of molecules is also important in determining the **miscibility**—the ability to mix without separating into two states—of liquids. In general, polar liquids are miscible with other polar liquids but are not miscible with nonpolar liquids. For example, water, a polar liquid, is not miscible with pentane (C_5H_{12}), a nonpolar liquid (**Figure 11.9** ▼). Similarly, water and oil (also nonpolar) do not mix. Consequently, oily hands or oily stains on clothes cannot be cleaned with plain water.



▲ **FIGURE 11.9 Polar and Nonpolar Compounds**

EXAMPLE 11.1

Dipole–Dipole Forces

Interactive
Worked Example
Video 11.1PEARSON
eText
2.0

Which of these molecules have dipole–dipole forces?

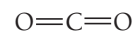
- (a)
- CO_2
- (b)
- CH_2Cl_2
- (c)
- CH_4

SOLUTION

A molecule has dipole–dipole forces if it is polar. To determine if a molecule is polar, (1) *determine if the molecule contains polar bonds* and (2) *determine if the polar bonds add together to form a net dipole moment*.

(a) CO_2

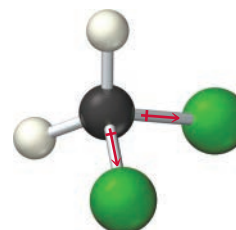
- Because the electronegativity of carbon is 2.5 and that of oxygen is 3.5 (Figure 5.3), CO_2 has polar bonds.
- The geometry of CO_2 is linear. Consequently, the dipoles of the polar bonds cancel, so the molecule is *nonpolar* and does not have dipole–dipole forces.



No dipole forces present

(b) CH_2Cl_2

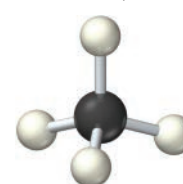
- The electronegativity of C is 2.5, that of H is 2.1, and that of Cl is 3.0. Consequently, CH_2Cl_2 has two polar bonds (C—Cl) and two bonds that are nearly nonpolar (C—H).
- The geometry of CH_2Cl_2 is tetrahedral. Because the C—Cl bonds and the C—H bonds are different, their dipoles do not cancel but sum to a net dipole moment. The molecule is polar and has dipole–dipole forces.



Dipole forces present

(c) CH_4

- Because the electronegativity of C is 2.5 and that of hydrogen is 2.1, the C—H bonds are nearly nonpolar.
- In addition, because the geometry of the molecule is tetrahedral, any slight polarities that the bonds might have will cancel. CH_4 is therefore nonpolar and does not have dipole–dipole forces.



No dipole forces present

FOR PRACTICE 11.1

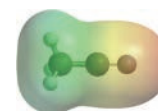
Which molecules have dipole–dipole forces?

- (a)
- Cl_4
- (b)
- CH_3Cl
- (c)
- HCl

PEARSON
eText
2.011.3
CcConceptual
Connection

Dipole–Dipole Interaction

An electrostatic potential map for acetonitrile (CH_3CN), which is polar, is shown here. From this map, determine how two acetonitrile molecules would interact with each other. Draw structural formulas, using the three-dimensional bond notation introduced in Section 5.9, to illustrate the geometry of the interaction.



Hydrogen Bonding

Polar molecules that contain hydrogen atoms bonded directly to small electronegative atoms—most importantly fluorine, oxygen, or nitrogen—exhibit an intermolecular force called **hydrogen bonding**. HF , NH_3 , and H_2O , for example, all undergo hydrogen bonding. The hydrogen bond is a sort of *super* dipole–dipole force. The large electronegativity difference between hydrogen and these electronegative elements causes the hydrogen atom to have a fairly large partial positive charge (δ^+) within the bond,

Hydrogen Bonding

When H bonds directly to F, O, or N, the bonding atoms acquire relatively large partial charges, giving rise to strong dipole–dipole attractions between neighboring molecules.

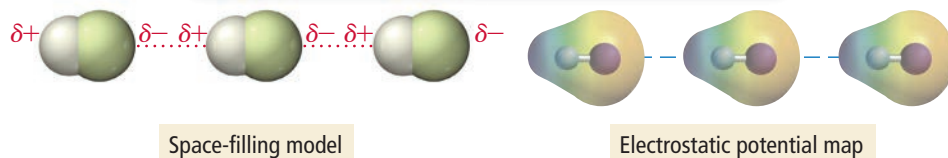


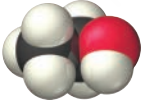
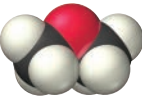
FIGURE 11.10 Hydrogen Bonding in HF The hydrogen of one HF molecule, with its partial positive charge, is attracted to the fluorine of its neighbor, with its partial negative charge. This dipole–dipole interaction is an example of a hydrogen bond.

while the F, O, or N atom has a fairly large partial negative charge (δ^-). In addition, since these atoms are all quite small, the H atom on one molecule can approach the F, O, or N atom on an adjacent molecule very closely. The result is a strong attraction between the H atom on one molecule and the F, O, or N on its neighbor—an attraction called a **hydrogen bond**.

For example, in HF, the hydrogen atom in one molecule is strongly attracted to the fluorine atom on a neighboring molecule (**Figure 11.10** ▲). The electrostatic potential maps in Figure 11.10 show the large differences in electron density that result in unusually large partial charges.

Hydrogen bonds should not be confused with chemical bonds. Chemical bonds occur *between individual atoms within a molecule*, whereas hydrogen bonds—like dispersion forces and dipole–dipole forces—are intermolecular forces that occur *between molecules*. A typical hydrogen bond is only 2–5% as strong as a typical covalent chemical bond. Hydrogen bonds are, however, the strongest of the three *intermolecular* forces we have discussed so far. Substances composed of molecules that form hydrogen bonds often have higher melting and boiling points than substances composed of molecules that do not form hydrogen bonds.

For example, consider the differences in boiling points and melting points between ethanol and dimethyl ether (the two molecules on the cover of this book):

Name	Formula	Molar Mass (amu)	Structure	bp (°C)	mp (°C)
Ethanol	<chem>C2H6O</chem> 	46.07	<chem>CH3CH2OH</chem>	78.3	−114.1
Dimethyl Ether	<chem>C2H6O</chem> 	46.07	<chem>CH3OCH3</chem>	−22.0	−141

The two compounds have identical molar masses (in fact, the two compounds are isomers), yet their boiling and melting points are different. Ethanol is a liquid at room temperature while dimethyl ether is a gas. Why? Because the structure of ethanol allows it to undergo hydrogen bonding. Ethanol contains hydrogen bonded directly to oxygen, so ethanol molecules form hydrogen bonds with each other as shown in **Figure 11.11** ►. The hydrogen that is directly bonded to oxygen in an individual ethanol molecule is also strongly attracted to the oxygen on neighboring molecules. This strong attraction makes the boiling point of ethanol 78.3°C. In contrast, dimethyl ether does not exhibit hydrogen bonding because, in the dimethyl ether molecule, the oxygen atom is not bonded directly to hydrogen. This results in lower boiling and melting points.

The partially positive charge on H is strongly attracted to the partial negative charge on O.

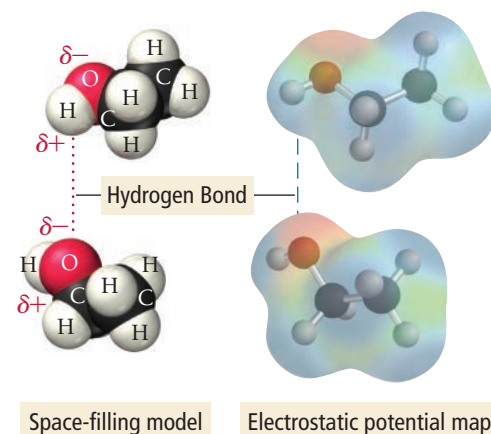
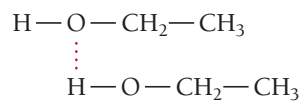
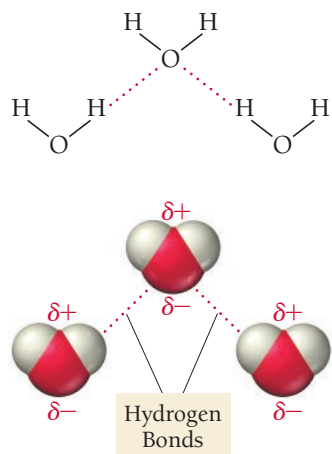
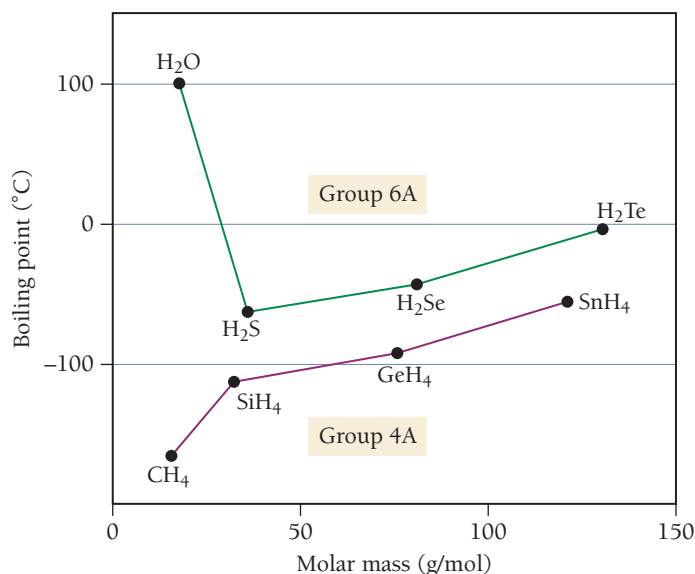


FIGURE 11.11 Hydrogen Bonding in Ethanol The left side shows the structural formula, the center shows the space-filling models, and the right side shows the electrostatic potential maps.

Hydrogen Bonding in Water



▲ **FIGURE 11.12** Hydrogen Bonding in Water



◀ **FIGURE 11.13** Boiling Points of Group 4A and 6A

Compounds Because of hydrogen bonding, the boiling point of water is anomalous compared to the boiling points of other hydrogen-containing compounds.

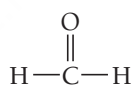
Water is another molecule with hydrogen bonding (**Figure 11.12** ◀). **Figure 11.13** ▲ shows the boiling points of the simple hydrogen compounds of the Group 4A and Group 6A elements. In general, boiling points increase with increasing molar mass, as expected, based on increasing dispersion forces. However, because of hydrogen bonding, the boiling point of water (100°C) is much higher than expected based on its molar mass (18.0 g/mol). Without hydrogen bonding, all the water on our planet would be gaseous.

EXAMPLE 11.2**Hydrogen Bonding**

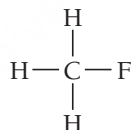
Interactive
Worked Example
Video 11.2

PEARSON
eText
2.0

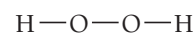
One of these compounds is a liquid at room temperature. Which one and why?



formaldehyde



fluoromethane



hydrogen peroxide

SOLUTION

The three compounds have similar molar masses.

formaldehyde 30.03 g/mol

fluoromethane 34.03 g/mol

hydrogen peroxide 34.02 g/mol

Therefore, the strengths of their dispersion forces are similar. All three compounds are also polar, so they have dipole–dipole forces. Hydrogen peroxide, however, is the only one of these compounds that also contains H bonded directly to F, O, or N. Therefore, it also has hydrogen bonding and is likely to have the highest boiling point of the three. Because the example states that only one of the compounds is a liquid, you can safely assume that hydrogen peroxide is the liquid. Note that, although fluoromethane *contains* both H and F, H is not *directly bonded* to F, so fluoromethane does not have hydrogen bonding as an intermolecular force. Similarly, formaldehyde *contains* both H and O, but H is not *directly bonded* to O, so formaldehyde does not have hydrogen bonding either.

FOR PRACTICE 11.2

Which compound has the higher boiling point, HF or HCl? Why?

Ion–Dipole Force

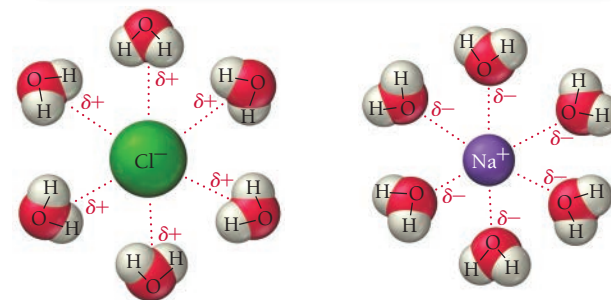
The **ion–dipole force** occurs when an ionic compound is mixed with a polar compound; it is especially important in aqueous solutions of ionic compounds. For example, when sodium chloride is mixed with water, the sodium and chloride ions interact with water molecules via ion–dipole forces, as shown in **Figure 11.14** ▶. The positive sodium ions interact with the negative poles of water molecules, while the negative chloride ions interact with the positive poles. Ion–dipole forces are the strongest types of intermolecular forces discussed in this section and are responsible for the ability of ionic substances to form solutions with water. We will discuss aqueous solutions more thoroughly in Chapter 13.

Summarizing Intermolecular Forces (as shown in Table 11.4):

- Dispersion forces are present in all molecules and atoms and increase with increasing molar mass. These forces are always weak in small molecules but can be significant in molecules with high molar masses.
- Dipole–dipole forces are present in polar molecules.
- Hydrogen bonds, the strongest of the intermolecular forces that can occur in pure substances (second only to ion–dipole forces in general), are present in molecules containing hydrogen bonded directly to fluorine, oxygen, or nitrogen.
- Ion–dipole forces are present in mixtures of ionic compounds and polar compounds. These forces are very strong and are especially important in aqueous solutions of ionic compounds.

Ion–Dipole Forces


The positively charged end of a polar molecule such as H_2O is attracted to negative ions, and the negatively charged end of the molecule is attracted to positive ions.



▲ FIGURE 11.14 Ion–Dipole Forces Ion–dipole forces exist between Na^+ and the negative ends of H_2O molecules and between Cl^- and the positive ends of H_2O molecules.

TABLE 11.4 Types of Intermolecular Forces

Type	Present In	Molecular Perspective	Strength
Dispersion	All molecules and atoms		0.05–20+ kJ/mol
Dipole–dipole	Polar molecules		3–20+ kJ/mol
Hydrogen bonding	Molecules containing H bonded to F, O, or N		10–40 kJ/mol
Ion–dipole	Mixtures of ionic compounds and polar compounds		30–100+ kJ/mol



11.4

Cc

Conceptual
Connection

Intermolecular Forces and Boiling Point

Which substance has the highest boiling point?

- (a) CH_3OH (b) CO (c) N_2



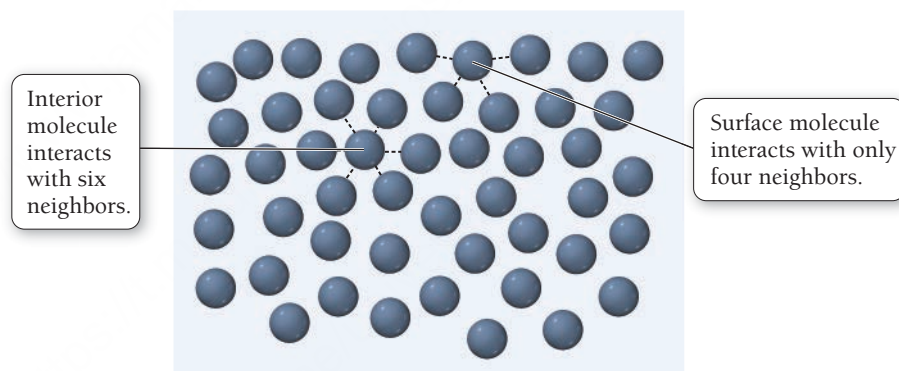
▲ A trout fly can float on water because of surface tension.

11.4 Intermolecular Forces in Action: Surface Tension, Viscosity, and Capillary Action

The most important manifestation of intermolecular forces is the existence of molecular liquids and solids. In liquids, we also observe several other manifestations of intermolecular forces including surface tension, viscosity, and capillary action.

Surface Tension

A person delicately casts a small fishing fly (a metal hook with a few feathers and strings attached to make it look like an insect) onto the surface of a moving stream. The fly floats on the surface of the water—even though the metal composing the hook is denser than water—and attracts trout. Why? The hook floats because of *surface tension*, the tendency of liquids to minimize their surface area.




Recall from Section 11.3 that the interactions between molecules lower their potential energy in much the same way that the interaction between protons and electrons lowers their potential energy, in accordance with Coulomb's law.

▲ **FIGURE 11.15 Surface Tension** Because interactions lower potential energy, the greater the number of interactions, the lower the potential energy. Consequently, molecules crowd into the interior of a liquid (and avoid the surface) in order to maximize their interactions with other molecules.

Figure 11.15 ▲ depicts the intermolecular forces experienced by a molecule at the surface of the liquid compared to those experienced by a molecule in the interior. Notice that a molecule at the surface has relatively fewer neighbors with which to interact, and it is therefore inherently less stable—it has higher potential energy—than those in the interior. (Remember that attractive interactions with other molecules lower potential energy.) In order to increase the surface area of the liquid, molecules from the interior must move to the surface, and, because molecules at the surface have a higher potential energy than those in the interior, this movement requires energy. Therefore, liquids tend to minimize their surface area. The **surface tension** of a liquid is the energy required to increase the surface area by a unit amount. For example, at room temperature, water has a surface tension of $72.8 \text{ mJ}/\text{m}^2$ —it takes 72.8 mJ to increase the surface area of water by one square meter.

Why does surface tension allow the fish fly to float on water? The tendency for liquids to minimize their surface creates a kind of skin at the surface that resists penetration. For the angler's hook to sink into the water, the water's surface area must increase slightly—an increase that is resisted by the surface tension. We can observe surface tension by carefully placing a paper clip on the surface of water (**Figure 11.16** ◀). The paper clip, even though it is denser than water, floats on the surface of the water. A slight tap on the clip provides the energy necessary to overcome the surface tension and causes the clip to sink.



▲ **FIGURE 11.16 Surface Tension in Action** A paper clip floats on water because of surface tension.

Surface tension decreases as intermolecular forces decrease. You can't float a paper clip on benzene, for example, because the dispersion forces among the molecules composing benzene are significantly weaker than the hydrogen bonds among water molecules. The surface tension of benzene is only 28 mJ/m^2 —just 40% that of water.

Surface tension is also the reason that small water droplets (those not large enough to be distorted by gravity) form nearly perfect spheres. As noted in Section 11.1, in environments such as the space station and the space shuttle, the complete absence of gravity allows even large samples of water to form nearly perfect spheres (**Figure 11.17** ▶). Why? Just as gravity pulls the matter of a planet or star inward to form a sphere, so intermolecular forces among water molecules pull the water into a sphere. A sphere is the geometrical shape with the smallest surface area to volume ratio; the formation of a sphere minimizes the number of molecules at the surface, thus minimizing the potential energy of the system.

Viscosity

Another manifestation of intermolecular forces is **viscosity**, the resistance of a liquid to flow. Motor oil, for example, is more viscous than gasoline, and maple syrup is more viscous than water. Viscosity is measured in a unit called the poise (P), defined as $1 \text{ g/cm} \cdot \text{s}$. The viscosity of water at room temperature is approximately one centipoise (cP). Viscosity is greater in substances with stronger intermolecular forces because if molecules are more strongly attracted to each other, they do not flow around each other as freely. Viscosity also depends on molecular shape, increasing in longer molecules that can interact over a greater area and possibly become entangled. Table 11.5 lists the viscosity of several hydrocarbons. Notice the increase in viscosity with increasing molar mass (and therefore increasing magnitude of dispersion forces) and with increasing length (and therefore increasing potential for molecular entanglement).

Viscosity also depends on temperature because thermal energy partially overcomes the intermolecular forces, allowing molecules to flow past each other more easily. Table 11.6 lists the viscosity of water as a function of temperature. Nearly all liquids become less viscous as temperature increases.

TABLE 11.5 Viscosity of Several Hydrocarbons at 20 °C

Hydrocarbon	Molar Mass (g/mol)	Formula	Viscosity (cP)
<i>n</i> -Pentane	72.15	$\text{CH}_3\text{CH}_2\text{CH}_2\text{CH}_2\text{CH}_3$	0.240
<i>n</i> -Hexane	86.17	$\text{CH}_3\text{CH}_2\text{CH}_2\text{CH}_2\text{CH}_2\text{CH}_3$	0.326
<i>n</i> -Heptane	100.2	$\text{CH}_3\text{CH}_2\text{CH}_2\text{CH}_2\text{CH}_2\text{CH}_2\text{CH}_3$	0.409
<i>n</i> -Octane	114.2	$\text{CH}_3\text{CH}_2\text{CH}_2\text{CH}_2\text{CH}_2\text{CH}_2\text{CH}_2\text{CH}_3$	0.542
<i>n</i> -Nonane	128.3	$\text{CH}_3\text{CH}_2\text{CH}_2\text{CH}_2\text{CH}_2\text{CH}_2\text{CH}_2\text{CH}_2\text{CH}_3$	0.711



▲ FIGURE 11.17 Spherical Water

On the space shuttle in orbit, under weightless conditions, collections of water molecules coalesce into nearly perfect spheres held together by intermolecular forces between molecules.

TABLE 11.6 Viscosity of Liquid Water at Several Temperatures

Temperature (°C)	Viscosity (cP)
20	1.002
40	0.653
60	0.467
80	0.355
100	0.282

Capillary Action

Medical technicians take advantage of **capillary action**—the ability of a liquid to flow against gravity up a narrow tube—when taking a blood sample. The technician pokes the patient's finger with a pin, squeezes some blood out of the puncture, and collects the blood with a thin tube. When the tube's tip comes into contact with the blood, the blood is drawn into the tube by capillary action. The same force helps trees and plants draw water from the soil.

Capillary action results from a combination of two forces: the attraction between molecules in a liquid, called *cohesive forces*, and the attraction between these molecules and the surface of the tube, called *adhesive forces*. The adhesive forces cause the liquid to spread out over the surface of the tube, while the cohesive forces cause the liquid to stay together. If the adhesive forces are greater than the cohesive forces (as is the case for water in a thin glass tube), the attraction to the surface draws the liquid up the tube and



▲ Blood is drawn into a capillary tube by capillary action.



▲ **FIGURE 11.18 Capillary Action** The attraction of water molecules to the glass surface draws the liquid around the edge of the tube up the walls. The water in the rest of the column is pulled along by the attraction of water molecules to one another. As can be seen in this figure, the narrower the tube, the higher the liquid will rise.




▲ **FIGURE 11.19 Menisci of Water and Mercury** The meniscus of water (on the left) is concave because water molecules are more strongly attracted to the glass wall than to one another. The meniscus of mercury is convex (on the right) because mercury atoms are more strongly attracted to one another than to the glass walls.

the cohesive forces pull along those molecules not in direct contact with the tube walls (**Figure 11.18** ◀). The water rises up the tube until the force of gravity balances the capillary action—the thinner the tube, the higher the rise. If the adhesive forces are smaller than the cohesive forces (as is the case for liquid mercury), the liquid does not rise up the tube at all (and in fact will drop to a level below the level of the surrounding liquid).

We can see the result of the differences in the relative magnitudes of cohesive and adhesive forces by comparing the meniscus of water to the meniscus of mercury (**Figure 11.19** ◀). (The meniscus is the curved shape of a liquid surface within a tube.) The meniscus of water is concave (rounded inward) because the *adhesive forces* are greater than the cohesive forces, causing the edges of the water to creep up the sides of the tube a bit, forming the familiar cupped shape. The meniscus of mercury is convex (rounded outward) because the *cohesive forces*—due to metallic bonding between the atoms—are greater than the adhesive forces. The mercury atoms crowd toward the interior of the liquid to maximize their interactions with each other, resulting in the upward bulge at the center of the surface.



KEY CONCEPT VIDEO
Vaporization and Vapor Pressure



▲ **FIGURE 11.20 Vaporization of Water** Some molecules in an open beaker have enough kinetic energy to vaporize from the surface of the liquid.

► **FIGURE 11.21 Distribution of Thermal Energy** The thermal energies of the molecules in a liquid are distributed over a range. The peak energy increases with increasing temperature.

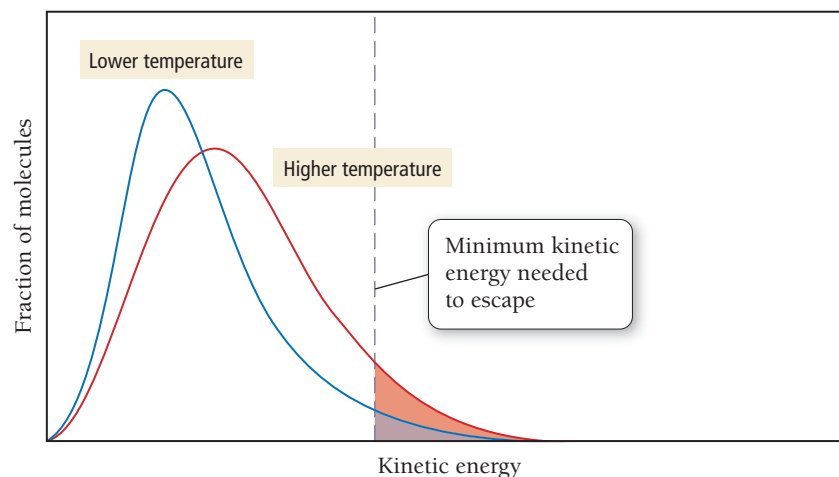
11.5 Vaporization and Vapor Pressure

We now turn our attention to vaporization, the process by which *thermal energy can overcome intermolecular forces and produce a state change from liquid to gas*. We first introduce the process of vaporization itself, then we discuss the energetics of vaporization, and finally the concepts of vapor pressure, dynamic equilibrium, and critical point. Vaporization is a common occurrence that we experience every day and even depend on to maintain proper body temperature.

The Process of Vaporization

Imagine water molecules at room temperature in a beaker that is open to the atmosphere (**Figure 11.20** ◀). The molecules are in constant motion due to thermal energy. If we could actually see the molecules at the surface, we would witness what Roald Hoffmann described as a “wild dance floor” (see the chapter-opening quote) because of all the vibrating, jostling, and molecular movement. *The higher the temperature, the greater the average energy of the collection of molecules*. However, at any one time, some molecules have more thermal energy than the average and some have less.

The distributions of thermal energies for the molecules in a sample of water at two different temperatures are shown in **Figure 11.21** ▼. The molecules at the high end of the distribution curve have enough energy to break free from the surface—where molecules are held less tightly than in the interior due to



fewer neighbor–neighbor hydrogen bonds—and into the gas state. This transition, from liquid to gas, is called **vaporization**. Some of the water molecules in the gas state, at the low end of the energy distribution curve for the gaseous molecules, plunge back into the water and are captured by intermolecular forces. This transition, from gas to liquid, is the opposite of vaporization and is called **condensation**.

Although both evaporation and condensation occur in a beaker open to the atmosphere, under normal conditions, evaporation takes place at a greater rate because most of the newly evaporated molecules escape into the surrounding atmosphere and never come back. The result is a noticeable decrease in the water level within the beaker over time (usually several days).

What happens if we increase the temperature of the water within the beaker? Because of the shift in the energy distribution to higher energies (see Figure 11.21), more molecules now have enough energy to break free and evaporate, so vaporization occurs more quickly. What happens if we spill the water on the table or floor? The same amount of water is now spread over a wider area, resulting in more molecules at the surface of the liquid. Molecules at the surface have the greatest tendency to evaporate—because they are held less tightly—so vaporization also occurs more quickly in this case. You probably know from experience that water in a beaker or glass may take many days to evaporate completely, while the same amount of water spilled on a table or floor typically evaporates within a few hours (depending on the conditions).

What happens if the liquid in the beaker is not water, but some other substance with weaker intermolecular forces, such as acetone (the main component in nail polish remover)? The weaker intermolecular forces allow more molecules to evaporate at a given temperature, increasing the rate of vaporization. We call liquids that vaporize easily **volatile**, and those that do not vaporize easily **nonvolatile**. Acetone is more volatile than water. Motor oil is virtually nonvolatile at room temperature.

Summarizing the Process of Vaporization:

- The rate of vaporization increases with increasing temperature.
- The rate of vaporization increases with increasing surface area.
- The rate of vaporization increases with decreasing strength of intermolecular forces.

The Energetics of Vaporization

To understand the energetics of vaporization, consider again a beaker of water from the molecular point of view, except now imagine that the beaker is thermally insulated so that heat from the surroundings cannot enter the beaker. What happens to the temperature of the water left in the beaker as molecules evaporate? To answer this question, think about the energy distribution curve again (see Figure 11.21). The molecules that leave the beaker are the ones at the high end of the energy curve—the most energetic. If no additional heat enters the beaker, the average energy of the entire collection of molecules decreases—much as the class average on an exam goes down if we eliminate the highest scores. Vaporization is an *endothermic* process; it takes energy to vaporize the molecules in a liquid. Another way to understand the endothermicity of vaporization is to remember that vaporization requires overcoming the intermolecular forces that hold liquids together. Because energy is needed to pull the molecules away from one another, the process is endothermic.

Our bodies rely on the endothermic nature of vaporization for cooling. When we overheat, we sweat and our skin becomes covered with liquid water. As this water evaporates, it absorbs heat from the body, cooling the skin. A fan makes us feel cooler because it blows newly vaporized water away from our skin, allowing more sweat to vaporize and causing even more cooling. High humidity, on the other hand, slows down the net rate of evaporation, preventing cooling. When the air already contains large amounts of water vapor, our sweat evaporates more slowly, making the body's cooling system less efficient.

Condensation, the opposite of vaporization, is exothermic—heat is released when a gas condenses to a liquid. If you have ever accidentally put your hand above a steaming kettle or opened a bag of microwaved popcorn too soon, you may have experienced a *steam burn*. As the steam condenses to a liquid on your skin, it releases a lot of heat, causing the burn. The condensation of water vapor is also the reason that winter overnight temperatures in coastal regions, which tend to have water vapor in the air, do not get as low as in deserts, which tend to have dry air. As the air temperature in a coastal area drops, water condenses out of the air, releasing heat and preventing the temperature from dropping further. In deserts, the air contains almost no moisture to condense, so the temperature drop is more extreme.

See Chapter 9 to review endothermic and exothermic processes.



▲ When we sweat, water evaporates from the skin. Since evaporation is endothermic, the result is a cooling effect.

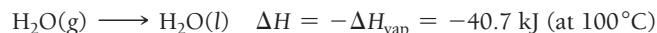
The amount of heat required to vaporize one mole of a liquid to gas is its **heat (or enthalpy) of vaporization** (ΔH_{vap}). The heat of vaporization of water at its normal boiling point of 100°C is +40.7 kJ/mol.



The sign conventions of ΔH were introduced in Chapter 9.

The heat of vaporization is always positive because the process is endothermic—energy must be absorbed to vaporize a substance. The heat of vaporization is somewhat temperature-dependent. For example, at 25°C the heat of vaporization of water is +44.0 kJ/mol, slightly more than it is at 100°C because the water contains less thermal energy at 25°C. Table 11.7 lists the heats of vaporization of several liquids at their boiling points and at 25°C.

When a substance condenses from a gas to a liquid, the same amount of heat is involved, but the heat is emitted rather than absorbed.



When 1.00 mol of water condenses, it releases 40.7 kJ of heat. The sign of ΔH in this case is negative because the process is exothermic.

We can use the heat of vaporization of a liquid to calculate the amount of energy required to vaporize a given mass of the liquid (or the amount of heat given off by the condensation of a given mass of liquid), using concepts similar to those covered in Section 9.6. The heat of vaporization is like a conversion factor between the number of moles of a liquid and the amount of heat required to vaporize it (or the amount of heat emitted when it condenses), as demonstrated in Example 11.3.

EXAMPLE 11.3

Interactive
Worked Example
Video 11.3

PEARSON
eText
2.0

Using the Heat of Vaporization in Calculations

Calculate the mass of water (in g) that can be vaporized at its boiling point with 155 kJ of heat.

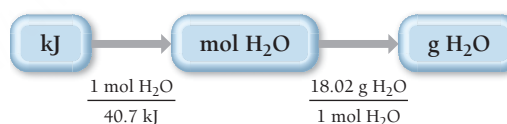
SORT You are given a certain amount of heat in kilojoules and asked to find the mass of water that can be vaporized.

GIVEN: 155 kJ

FIND: g H₂O

STRATEGIZE The heat of vaporization gives the relationship between heat absorbed and moles of water vaporized. Begin with the given amount of heat (in kJ) and convert to moles of water that can be vaporized. Use the molar mass as a conversion factor to convert from moles of water to mass of water.

CONCEPTUAL PLAN



RELATIONSHIPS USED

$$\Delta H_{\text{vap}} = 40.7 \text{ kJ/mol (at } 100^\circ\text{C)}$$

$$18.02 \text{ g H}_2\text{O} = 1 \text{ mol H}_2\text{O}$$

SOLVE Follow the conceptual plan to solve the problem.

SOLUTION

$$155 \text{ kJ} \times \frac{1 \text{ mol H}_2\text{O}}{40.7 \text{ kJ}} \times \frac{18.02 \text{ g H}_2\text{O}}{1 \text{ mol H}_2\text{O}} = 68.6 \text{ g H}_2\text{O}$$

FOR PRACTICE 11.3

Calculate the amount of heat (in kJ) required to vaporize 2.58 kg of water at its boiling point.

FOR MORE PRACTICE 11.3

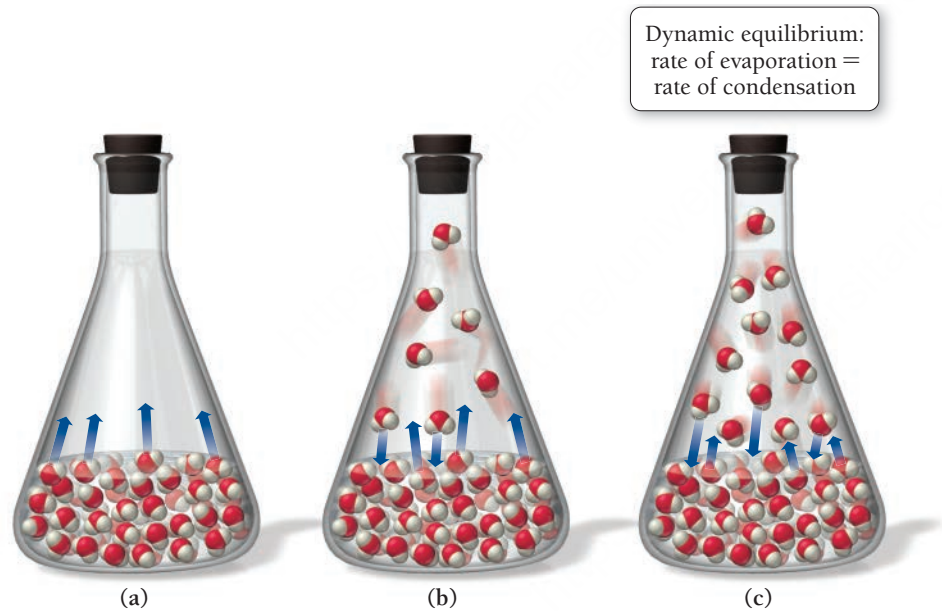
Suppose that 0.48 g of water at 25°C condenses on the surface of a 55 g block of aluminum that is initially at 25°C. If the heat released during condensation goes only toward heating the metal, what is the final temperature (in °C) of the metal block? (The specific heat capacity of aluminum is 0.903 J/g °C).

TABLE 11.7 Heats of Vaporization of Several Liquids at Their Boiling Points and at 25 °C

Liquid	Chemical Formula	Normal Boiling Point (°C)	ΔH_{vap} (kJ/mol) at Boiling Point	ΔH_{vap} (kJ/mol) at 25 (°C)
Water	H ₂ O	100.0	40.7	44.0
Rubbing alcohol (isopropyl alcohol)	C ₃ H ₈ O	82.3	39.9	45.4
Acetone	C ₃ H ₆ O	56.1	29.1	31.0
Diethyl ether	C ₄ H ₁₀ O	34.6	26.5	27.1

Vapor Pressure and Dynamic Equilibrium

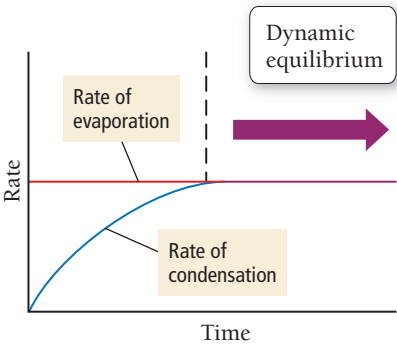
We have already seen that if a container of water is left uncovered at room temperature, the water slowly evaporates away. But what happens if the container is sealed? Imagine a sealed evacuated flask—one from which the air has been removed—containing liquid water, as shown in **Figure 11.22** ▼. Initially, the water molecules evaporate, as they did in the open beaker. However, because of the seal, the evaporated molecules



▲ **FIGURE 11.22 Vaporization in a Sealed Flask** (a) When water is in a sealed container, water molecules begin to vaporize. (b) As water molecules build up in the gas state, they begin to recondense into the liquid. (c) When the rate of evaporation equals the rate of condensation, dynamic equilibrium is reached.

cannot escape into the atmosphere. As water molecules enter the gas state, some start condensing back into the liquid. As the concentration (or partial pressure) of gaseous water molecules increases, the rate of condensation also increases. However, as long as the water remains at a constant temperature, the rate of evaporation remains constant. Eventually, the rate of condensation and the rate of vaporization become equal—in other words, **dynamic equilibrium** is reached (**Figure 11.23** ►). Condensation and vaporization continue at equal rates, and the concentration of water vapor above the liquid is constant.

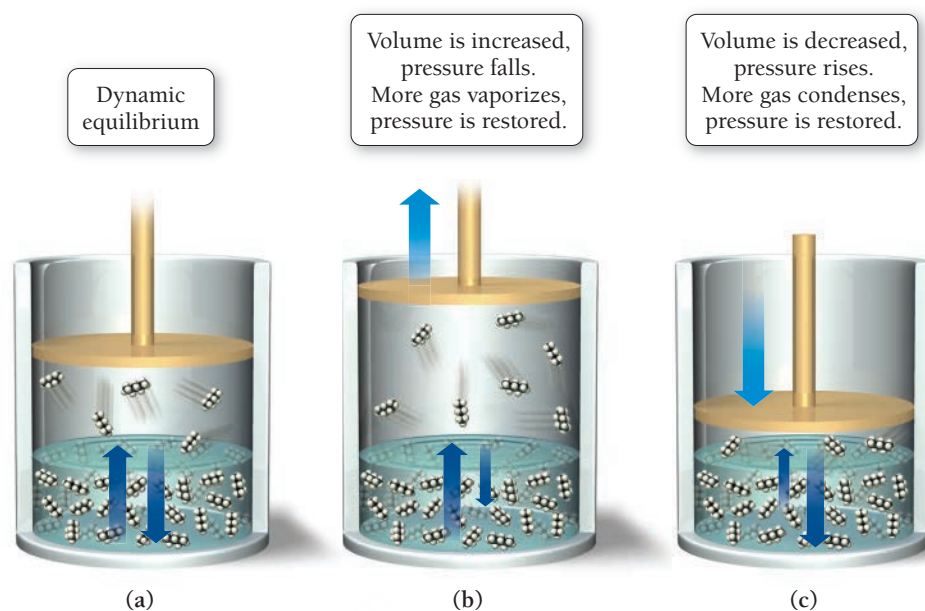
The pressure of a gas in dynamic equilibrium with its liquid is its **vapor pressure**. The vapor pressure of a particular liquid depends on the intermolecular forces present in the liquid and the temperature. Weak intermolecular forces result in volatile substances with high vapor pressures because the intermolecular forces are easily overcome by thermal energy. Strong intermolecular forces result in nonvolatile substances with low vapor pressures.



▲ **FIGURE 11.23 Dynamic Equilibrium** Dynamic equilibrium occurs when the rate of condensation is equal to the rate of evaporation.

► **FIGURE 11.24** Dynamic**Equilibrium in *n*-Pentane**

(a) Liquid *n*-pentane is in dynamic equilibrium with its vapor. (b) When the volume is increased, the pressure drops and some liquid converts to gas to bring the pressure back up. (c) When the volume is decreased, the pressure increases and some gas converts to liquid to bring the pressure back down.



A liquid in dynamic equilibrium with its vapor is a balanced system that tends to return to equilibrium if disturbed. For example, consider a sample of *n*-pentane (a component of gasoline) at 25°C in a cylinder equipped with a moveable piston (**Figure 11.24a** ▲). The cylinder contains no other gases except *n*-pentane vapor in dynamic equilibrium with the liquid. Because the vapor pressure of *n*-pentane at 25°C is 510 mmHg, the pressure in the cylinder is 510 mmHg. What happens when we move the piston upward to expand the volume within the cylinder? Initially, the pressure in the cylinder drops below 510 mmHg, in accordance with Boyle's law. Then, however, more liquid vaporizes until equilibrium is reached once again (**Figure 11.24b** ▲). If we expand the volume of the cylinder again, the same thing happens—the pressure initially drops and more *n*-pentane vaporizes to bring the system back into equilibrium. Further expansion causes the same result *as long as any liquid *n*-pentane remains in the cylinder*.

Conversely, what happens if we lower the piston, decreasing the volume in the cylinder? Initially, the pressure in the cylinder rises above 510 mmHg, but then some of the gas condenses into liquid until equilibrium is reached again (**Figure 11.24c** ▲).

We describe the tendency of a system in dynamic equilibrium to return to equilibrium with the following general statement:

When a system in dynamic equilibrium is disturbed, the system responds to minimize the disturbance and return to a state of equilibrium.

If the pressure above a liquid–vapor system in equilibrium decreases, some of the liquid evaporates, restoring the equilibrium pressure. If the pressure increases, some of the vapor condenses, bringing the pressure back down to the equilibrium pressure. This basic principle—*Le Châtelier's principle*—is applicable to any chemical system in equilibrium, as we shall see in Chapter 15.

Boyle's law is discussed in Section 10.4.



Conceptual
Connection

Vapor Pressure

What happens to the vapor pressure of a substance when its surface area is increased at constant temperature?

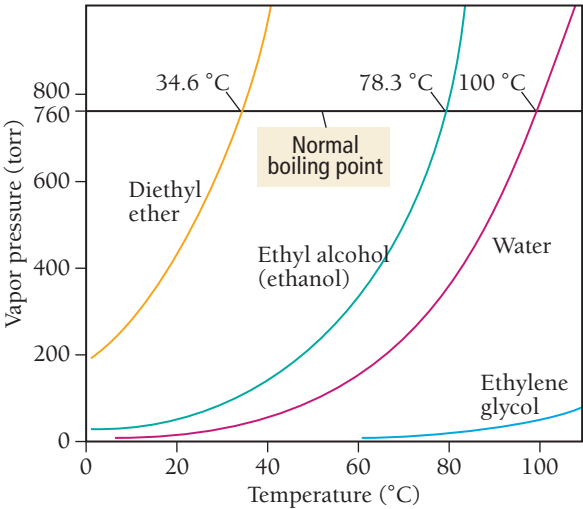
- The vapor pressure increases.
- The vapor pressure remains the same.
- The vapor pressure decreases.

Temperature Dependence of Vapor Pressure and Boiling Point

When the temperature of a liquid increases, its vapor pressure rises because the higher thermal energy increases the number of molecules that have enough energy to vaporize (see Figure 11.21). Because of the shape of the thermal energy distribution curve, a small change in temperature makes a large difference in the number of molecules that have enough energy to vaporize, which results in a large increase in vapor pressure. For example, the vapor pressure of water at 25°C is 23.3 torr, while at 60°C the vapor pressure is 149.4 torr. **Figure 11.25** shows the vapor pressure of water and several other liquids as a function of temperature.

The **boiling point** of a liquid is the temperature at which the liquid’s vapor pressure equals the external pressure. When a liquid reaches its boiling point, the thermal energy is enough for molecules in the interior of the liquid (not just those at the surface) to break free of their neighbors and enter the gas state (**Figure 11.26**). The bubbles in boiling water are pockets of gaseous water that have formed within the liquid water. The bubbles float to the surface and leave as gaseous water or steam.

The **normal boiling point** of a liquid is the temperature at which its vapor pressure equals 1 atm. The normal boiling point of pure water is 100°C. However, at a lower pressure, water boils at a lower temperature. In Denver, Colorado, where the altitude is around 1600 m (5200 ft) above sea level, for example, the average atmospheric pressure is about 83% of what it is at sea level, and water boils at approximately 94°C. For this reason, it takes slightly longer to cook food in boiling water in Denver than in San Francisco, California (which is at sea level). Table 11.8 shows the boiling point of water at several locations of varied altitudes.



▲ FIGURE 11.25 Vapor Pressure of Several Liquids at Different Temperatures At higher temperatures, more molecules have enough thermal energy to escape into the gas state, so vapor pressure increases with increasing temperature.

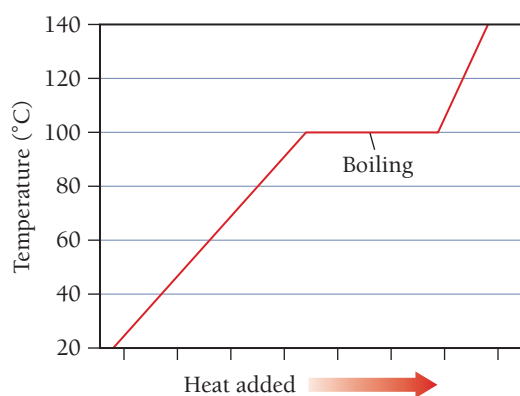
TABLE 11.8 Boiling Points of Water at Several Locations of Varied Altitudes

Location	Elevation (ft)	Approximate Pressure (atm)*	Approximate Boiling Point of Water (°C)
Mount Everest, Tibet (highest mountain peak on Earth)	29,035	0.32	78
Mount McKinley (Denali), Alaska (highest mountain peak in North America)	20,320	0.46	83
Mount Whitney, California (highest mountain peak in 48 contiguous United States)	14,495	0.60	87
Denver, Colorado (mile high city)	5,280	0.83	94
Boston, Massachusetts (sea level)	20	1.0	100

*The atmospheric pressure in each of these locations is subject to weather conditions and can vary significantly from these values.



◀ FIGURE 11.26 Boiling A liquid boils when thermal energy is high enough to cause molecules in the interior of the liquid to become gaseous, forming bubbles that rise to the surface. Sometimes you see bubbles begin to form in hot water below 100°C. These bubbles are dissolved air—not gaseous water—leaving the liquid.



▲ **FIGURE 11.27 The Temperature During Boiling** The temperature of water during boiling remains at 100°C.

Once the boiling point of a liquid is reached, additional heating only causes more rapid boiling; it does not raise the temperature of the liquid above its boiling point, as shown in the *heating curve* in **Figure 11.27** ◀. Therefore, at 1 atm, boiling water always has a temperature of 100°C. As long as liquid water is present, its temperature cannot rise above its boiling point. After all the water has been converted to steam, the temperature of the steam can rise beyond 100°C.

Now, let's return to Figure 11.25. As we can see from the graph, the vapor pressure of a liquid increases with increasing temperature. However, *the relationship is not linear*. In other words, doubling the temperature results in more than a doubling of the vapor pressure. The relationship between vapor pressure and temperature is exponential, and we express it as:

$$P_{\text{vap}} = \beta \exp\left(\frac{-\Delta H_{\text{vap}}}{RT}\right) \quad [11.1]$$

In this expression P_{vap} is the vapor pressure, β is a constant that depends on the gas, ΔH_{vap} is the heat of vaporization, R is the gas constant (8.314 J/mol · K), and T is the temperature in kelvins. We can rearrange Equation 11.1 by taking the natural logarithm of both sides:

$$\ln P_{\text{vap}} = \ln \left[\beta \exp\left(\frac{-\Delta H_{\text{vap}}}{RT}\right) \right] \quad [11.2]$$

Because $\ln AB = \ln A + \ln B$, we can rearrange the right side of Equation 11.2:

$$\ln P_{\text{vap}} = \ln \beta + \ln \left[\exp\left(\frac{-\Delta H_{\text{vap}}}{RT}\right) \right] \quad [11.3]$$

Because $\ln e^x = x$ (see Appendix IB), we can simplify Equation 11.3:

$$\ln P_{\text{vap}} = \ln \beta + \frac{-\Delta H_{\text{vap}}}{RT} \quad [11.4]$$

A slight additional rearrangement gives the important result:

$$\ln P_{\text{vap}} = \frac{-\Delta H_{\text{vap}}}{R} \left(\frac{1}{T} \right) + \ln \beta$$

Clausius–Clapeyron equation

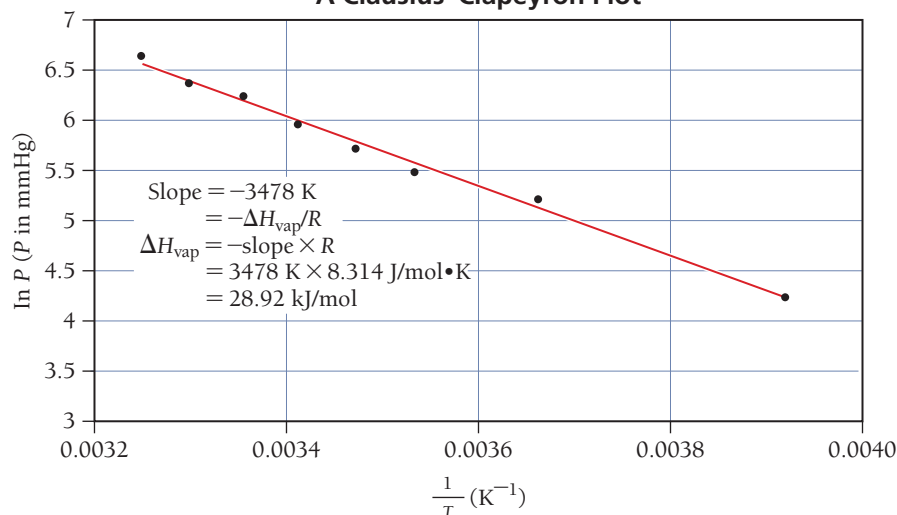
$$y = m(x) + b$$

Equation for a straight line

When we use the Clausius–Clapeyron equation in this way, we ignore the relatively small temperature dependence of ΔH_{vap} .

Notice the parallel relationship between the **Clausius–Clapeyron equation** and the equation for a straight line. Just as a plot of y versus x yields a straight line with slope m and intercept b , so a plot of $\ln P_{\text{vap}}$ (equivalent to y) versus $1/T$ (equivalent to x) gives a straight line with slope $-\Delta H_{\text{vap}}/R$ (equivalent to m) and y -intercept $\ln \beta$ (equivalent to b), as shown in **Figure 11.28** ▼. The Clausius–Clapeyron equation gives a linear relationship—not between the vapor pressure and the temperature (which have an exponential relationship)—but between the *natural log* of the vapor pressure and the *inverse* of temperature. This is a common technique in the analysis of chemical data. If two variables are not linearly related, it is often convenient to find ways to graph *functions of those variables* that are linearly related.

A Clausius–Clapeyron Plot



► **FIGURE 11.28 A Clausius–Clapeyron Plot for Diethyl Ether ($\text{CH}_3\text{CH}_2\text{OCH}_2\text{CH}_3$)** A plot of the natural log of the vapor pressure versus the inverse of the temperature in K yields a straight line with slope $-\Delta H_{\text{vap}}/R$.

The Clausius–Clapeyron equation leads to a convenient way to measure the heat of vaporization in the laboratory. We measure the vapor pressure of a liquid as a function of temperature and create a plot of the natural log of the vapor pressure versus the inverse of the temperature. We can then determine the slope of the line to find the heat of vaporization, as demonstrated in Example 11.4.

EXAMPLE 11.4

Using the Clausius–Clapeyron Equation to Determine Heat of Vaporization from Experimental Measurements of Vapor Pressure

The vapor pressure of dichloromethane is measured as a function of temperature, and the following results are obtained:

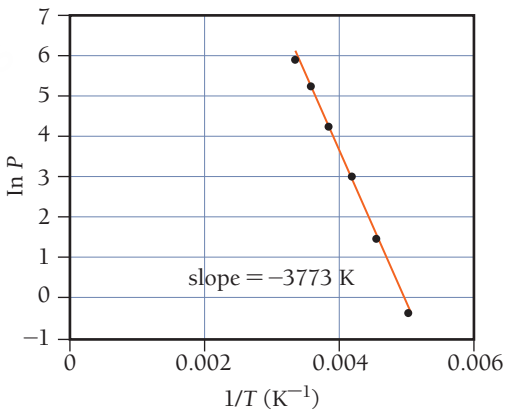
Temperature (K)	Vapor Pressure (torr)
200	0.8
220	4.5
240	21
260	71
280	197
300	391

Determine the heat of vaporization of dichloromethane.

SOLUTION

To find the heat of vaporization, use an Excel™ spreadsheet or a graphing calculator to make a plot of the natural log of vapor pressure ($\ln P$) as a function of the inverse of the temperature in kelvins ($1/T$). Fit the points to a line and determine the slope of the line. The slope of the best-fitting line is -3773 K . Because the slope equals $-\Delta H_{\text{vap}}/R$, we find the heat of vaporization as follows:

$$\begin{aligned} \text{slope} &= -\Delta H_{\text{vap}}/R \\ \Delta H_{\text{vap}} &= -\text{slope} \times R \\ &= -(-3773\text{ K})(8.314\text{ J/mol}\cdot\text{K}) \\ &= 3.14 \times 10^4\text{ J/mol} \\ &= 31.4\text{ kJ/mol} \end{aligned}$$



FOR PRACTICE 11.4

The vapor pressure of carbon tetrachloride is measured as a function of the temperature, and the following results are obtained:

Temperature (K)	Vapor Pressure (torr)
255	11.3
265	21.0
275	36.8
285	61.5
295	99.0
300	123.8

Determine the heat of vaporization of carbon tetrachloride.

The Clausius–Clapeyron equation can also be expressed in a two-point form that we can use with just two measurements of vapor pressure and temperature to determine the heat of vaporization:

$$\ln \frac{P_2}{P_1} = \frac{-\Delta H_{\text{vap}}}{R} \left(\frac{1}{T_2} - \frac{1}{T_1} \right) \quad \text{Clausius–Clapeyron equation (two-point form)}$$

The two-point method is generally inferior to plotting multiple points because fewer data points result in more chance for error.

We can use this two-point form of the equation to predict the vapor pressure of a liquid at any temperature if we know the enthalpy of vaporization and the normal boiling point (or the vapor pressure at some other temperature), as demonstrated in Example 11.5.

EXAMPLE 11.5

Using the Two-Point Form of the Clausius–Clapeyron Equation to Predict the Vapor Pressure at a Given Temperature

Interactive
Worked Example
Video 11.5

PEARSON
eText
2.0

Methanol has a normal boiling point of 64.6°C and a heat of vaporization (ΔH_{vap}) of 35.2 kJ/mol. What is the vapor pressure of methanol at 12.0°C?

SORT You are given the normal boiling point of methanol (the temperature at which the vapor pressure is 760 mmHg) and the heat of vaporization. You are asked to find the vapor pressure at a specified temperature that is also given.

GIVEN: $T_1(^{\circ}\text{C}) = 64.6^{\circ}\text{C}$ $P_1 = 760 \text{ torr}$
 $\Delta H_{\text{vap}} = 35.2 \text{ kJ/mol}$ $T_2(^{\circ}\text{C}) = 12.0^{\circ}\text{C}$
FIND: P_2

STRATEGIZE The conceptual plan is essentially the Clausius–Clapeyron equation, which relates the given and find quantities.

CONCEPTUAL PLAN

$$\ln \frac{P_2}{P_1} = \frac{-\Delta H_{\text{vap}}}{R} \left(\frac{1}{T_2} - \frac{1}{T_1} \right)$$
 (Clausius–Clapeyron equation, two-point form)

SOLVE First, convert T_1 and T_2 from $^{\circ}\text{C}$ to K.

SOLUTION
 $T_1(\text{K}) = T_1(^{\circ}\text{C}) + 273.15$
 $= 64.6 + 273.15$
 $= 337.8 \text{ K}$
 $T_2(\text{K}) = T_2(^{\circ}\text{C}) + 273.15$
 $= 12.0 + 273.15$
 $= 285.2 \text{ K}$

Substitute the required values into the Clausius–Clapeyron equation and solve for P_2 . Use the heat of vaporization in J/mol for the correct canceling of units with J in R.

$$\ln \frac{P_2}{P_1} = \frac{-\Delta H_{\text{vap}}}{R} \left(\frac{1}{T_2} - \frac{1}{T_1} \right)$$

$$\ln \frac{P_2}{P_1} = \frac{-35.2 \times 10^3 \frac{\text{J}}{\text{mol}}}{8.314 \frac{\text{J}}{\text{mol} \cdot \text{K}}} \left(\frac{1}{285.2 \text{ K}} - \frac{1}{337.8 \text{ K}} \right)$$

$$= -2.31$$

$$\frac{P_2}{P_1} = e^{-2.31}$$

$$P_2 = P_1(e^{-2.31})$$

$$= 760 \text{ torr} (0.0993) = 75.4 \text{ torr}$$

CHECK The units of the answer are correct. The magnitude of the answer makes sense because vapor pressure should be significantly lower at the lower temperature.

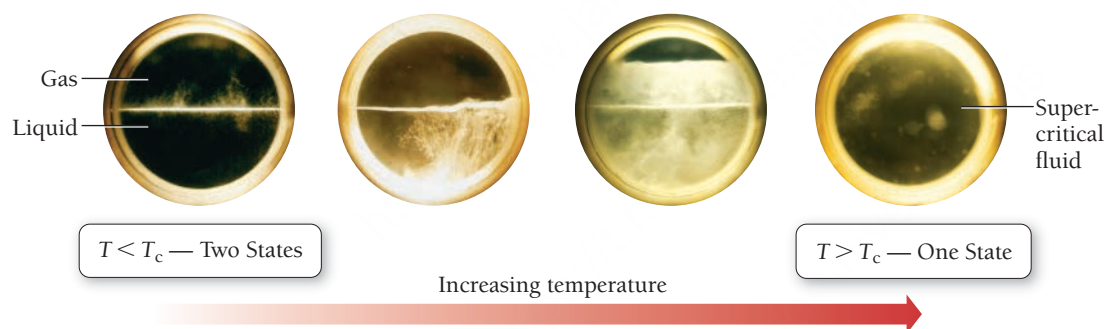
FOR PRACTICE 11.5

Propane has a normal boiling point of -42.0°C and a heat of vaporization (ΔH_{vap}) of 19.04 kJ/mol. What is the vapor pressure of propane at 25.0°C ?

The Critical Point: The Transition to an Unusual State of Matter

We have considered the vaporization of a liquid in a container open to the atmosphere with and without heating, and the vaporization of a liquid in a *sealed* container without heating. We now examine the vaporization of a liquid in a *sealed* container *during heating*. Consider liquid *n*-pentane in equilibrium with its vapor in a sealed container initially at 25°C. At this temperature, the vapor pressure of *n*-pentane is 0.67 atm. What happens if we heat the liquid? As the temperature rises, more *n*-pentane vaporizes, and the pressure within the container increases. At 100°C, the pressure is 5.5 atm, and at 190°C the pressure is 29 atm. As the temperature and pressure increase, more and more gaseous *n*-pentane is forced into the same amount of space, and the density of the gas gets higher and higher. At the same time, the increasing temperature causes the density of the *liquid* to become lower and lower. At 197°C, the meniscus between the liquid and gaseous *n*-pentane disappears, and the gas and liquid states commingle to form a *supercritical fluid* (**Figure 11.29 ▼**). For any substance, the *temperature* at which this transition to supercritical fluid occurs is the **critical temperature** (T_c). The liquid cannot exist (regardless of pressure) above this temperature. The *pressure* at which this transition occurs is the **critical pressure** (P_c).

Researchers are interested in supercritical fluids because of their unique properties. A supercritical fluid has properties of both liquids and gases—it is in some sense intermediate between the two. Supercritical fluids can act as good solvents, selectively dissolving a number of compounds. For example, supercritical carbon dioxide is used as a solvent to extract caffeine from coffee beans. The caffeine dissolves in the supercritical carbon dioxide, but other substances—such as those responsible for the flavor of coffee—do not dissolve. Consequently, the caffeine is removed without substantially altering the coffee's flavor. The supercritical carbon dioxide is easily removed from a mixture by lowering the pressure below the critical pressure, at which point the carbon dioxide evaporates, leaving no residue.



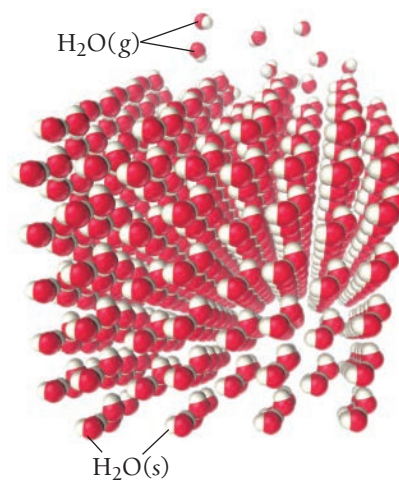
◀ **FIGURE 11.29 Critical Point Transition** As *n*-pentane is heated in a sealed container, it undergoes a transition to a supercritical fluid. At the critical point, the meniscus separating the liquid and gas disappears, and the fluid becomes supercritical—neither a liquid nor a gas.

11.6 Sublimation and Fusion

In Section 11.5, we examined a beaker of liquid water at room temperature from the molecular viewpoint. Now, let's examine a block of ice at -10°C from the same molecular perspective, paying close attention to two common processes: sublimation and fusion.

Sublimation

Even though a block of ice is solid, the water molecules have thermal energy, which causes each one to vibrate about a fixed point. The motion is much less vigorous than in a liquid, but it is significant nonetheless. As in liquids, at any instant some molecules in the block of ice have more thermal energy than the average and some have less. The molecules with high enough thermal energy can break free from the ice surface—where, as in liquids, molecules are held less tightly than in the interior due to fewer neighbor–neighbor interactions—and transition directly into the gas state (**Figure 11.30 ►**). This process is known as **sublimation**, the transition from solid to gas. Some of the water molecules in the gas state (those at the low end of the energy distribution curve for the gaseous molecules) collide with the surface of the ice and are captured by the intermolecular forces with other molecules. This process—the opposite of sublimation—is **deposition**, the transition from gas to solid. As is the case with liquids, the pressure of a gas in dynamic equilibrium with its solid is the vapor pressure of the solid.



▲ **FIGURE 11.30 The Sublimation of Ice** The water molecules at the surface of an ice cube can sublime directly into the gas state.



▲ Dry ice (solid CO_2) sublimates but does not melt at atmospheric pressure.

Although both sublimation and deposition occur on the surface of an ice block open to the atmosphere at -10°C , sublimation usually occurs at a greater rate because most of the newly sublimed molecules escape into the surrounding atmosphere and never come back. The result is a noticeable decrease in the size of the ice block over time (even though the temperature is below the melting point).

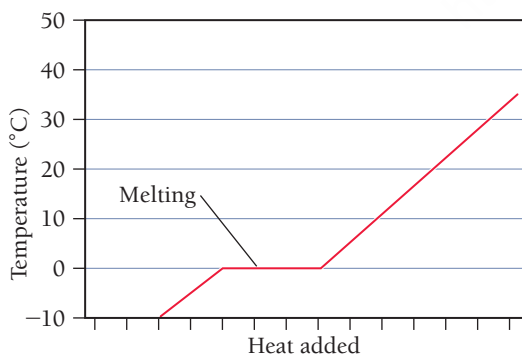
If you live in a cold climate, you may have noticed the disappearance of ice and snow from the ground even though the temperature remains below 0°C . Similarly, ice cubes left in the freezer for a long time slowly shrink, even though the freezer is always below 0°C . In both cases, the ice is *subliming*, turning directly into water vapor. Ice also sublimates out of frozen foods. You may have noticed, for example, the gradual growth of ice crystals on the *inside* of airtight plastic food-storage bags in a freezer. The ice crystals are composed of water that has sublimed out of the food and redeposited on the surface of the bag or on the surface of the food.

For this reason, food that remains frozen for too long becomes dried out. Such dehydration can be avoided to some degree by freezing foods to colder temperatures, a process called deep-freezing. The colder temperature lowers the vapor pressure of ice and preserves the food longer. Freezer burn on meats is another common manifestation of sublimation. When you improperly store meat (for example, in a container that is not airtight) sublimation continues unabated. The result is the dehydration of the surface of the meat, which becomes discolored and loses flavor and texture.

A substance commonly associated with sublimation is solid carbon dioxide or dry ice, which does not melt under atmospheric pressure no matter what the temperature is. However, at -78°C the CO_2 molecules have enough energy to leave the surface of the dry ice and become gaseous through sublimation.

Fusion

The term *fusion* is used for melting because if we heat crystals of a solid, they *fuse* into a continuous liquid upon melting.



▲ **FIGURE 11.31 Temperature during Melting** The temperature of water during melting remains at 0.0°C as long as both solid and liquid water remain.

Let's return to our ice block and examine what happens at the molecular level as we increase its temperature. The increasing thermal energy causes the water molecules to vibrate faster and faster. At the **melting point** (0°C for water), the molecules have enough thermal energy to overcome the intermolecular forces that hold the molecules at their stationary points, and the solid turns into a liquid. This process is **melting or fusion**, the transition from solid to liquid. The opposite of melting is **freezing**, the transition from liquid to solid. Once the melting point of a solid is reached, additional heating only causes more rapid melting; it does not raise the temperature of the solid above its melting point (**Figure 11.31** ▲). Only after all of the ice has melted does additional heating raise the temperature of the liquid water past 0°C . A mixture of water *and* ice always has a temperature of 0°C (at 1 atm pressure).

Energetics of Melting and Freezing

The most common way to cool a beverage quickly is to drop several ice cubes into it. As the ice melts, the drink cools because melting is endothermic—the melting ice absorbs heat from the liquid. The amount of heat required to melt one mole of a solid is the **heat of fusion** (ΔH_{fus}). The heat of fusion for water is 6.02 kJ/mol :



The heat of fusion is positive because melting is endothermic.

Freezing, the opposite of melting, is exothermic—heat is released when a liquid freezes into a solid. For example, as water in the freezer turns into ice, it releases heat, which must be removed by the refrigeration system of the freezer. If the refrigeration system did not remove the heat, the water would not completely freeze into ice. The heat released as the water began to freeze would warm the freezer, preventing further freezing. The change in enthalpy for freezing has the same magnitude as the heat of fusion but the opposite sign:



Different substances have different heats of fusion, as shown in Table 11.9.

TABLE 11.9 Heats of Fusion of Several Substances

Liquid	Chemical Formula	Melting Point (°C)	ΔH_{fus} (kJ/mol)
Water	H ₂ O	0.00	6.02
Rubbing alcohol (isopropyl alcohol)	C ₃ H ₈ O	−89.5	5.37
Acetone	C ₃ H ₆ O	−94.8	5.69
Diethyl ether	C ₄ H ₁₀ O	−116.3	7.27

In general, the heat of fusion for a substance is significantly less than its heat of vaporization, as shown in **Figure 11.32** ▶. We have already seen that the solid and liquid states are closer to each other in many ways than they are to the gas state. It takes less energy to melt one mole of ice into liquid than it does to vaporize one mole of liquid water into gas because vaporization requires complete separation of molecules from one another, so the intermolecular forces must be completely overcome. Melting, however, requires that intermolecular forces be only partially overcome, allowing molecules to move around one another while still remaining in contact.

11.7 Heating Curve for Water

We can combine and build on the concepts from Sections 11.5 and 11.6 by examining the *heating curve* for 1.00 mol of water at 1.00 atm pressure shown in **Figure 11.33** ▶ on the next page. The y-axis of the heating curve represents the temperature of the water sample. The x-axis represents the amount of heat added (in kilojoules) during heating. In the diagram, we divide the process into five segments: (1) ice warming; (2) ice melting into liquid water; (3) liquid water warming; (4) liquid water vaporizing into steam; and (5) steam warming.

In two of the segments in Figure 11.33 (Segments 2 and 4), the temperature is constant as heat is added because the added heat goes into producing the transition between states, not into increasing the temperature. The two states are in equilibrium during the transition, and the temperature remains constant. The amount of heat required to achieve the state change is given by $q = n\Delta H$.

In the other three segments (Segments 1, 3, and 5), temperature increases linearly. These segments represent the heating of single states in which the deposited heat raises the temperature in accordance with the substance’s heat capacity ($q = mC_s\Delta T$). Let’s examine each segment individually.

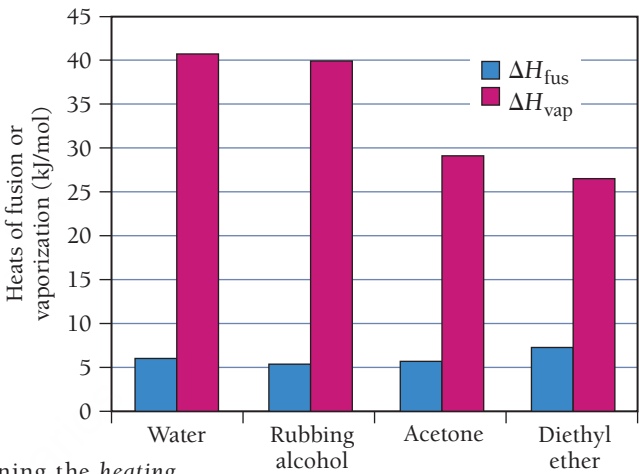
Segment 1 In Segment 1, solid ice is warmed from −25°C to 0°C. Since no transition between states occurs here, the amount of heat required to heat the solid ice is given by $q = mC_s\Delta T$ (see Section 9.4), where C_s is the specific heat capacity of ice ($C_{s,\text{ice}} = 2.09\text{ J/g}\cdot^\circ\text{C}$). For 1.00 mol of water (18.0 g), we calculate the amount of heat as follows:

$$\begin{aligned} q &= mC_{s,\text{ice}}\Delta T \\ &= 18.0\text{ g}\left(2.09\frac{\text{J}}{\text{g}\cdot^\circ\text{C}}\right)[0.0^\circ\text{C} - (-25.0^\circ\text{C})] \\ &= 941\text{ J} = 0.941\text{ kJ} \end{aligned}$$

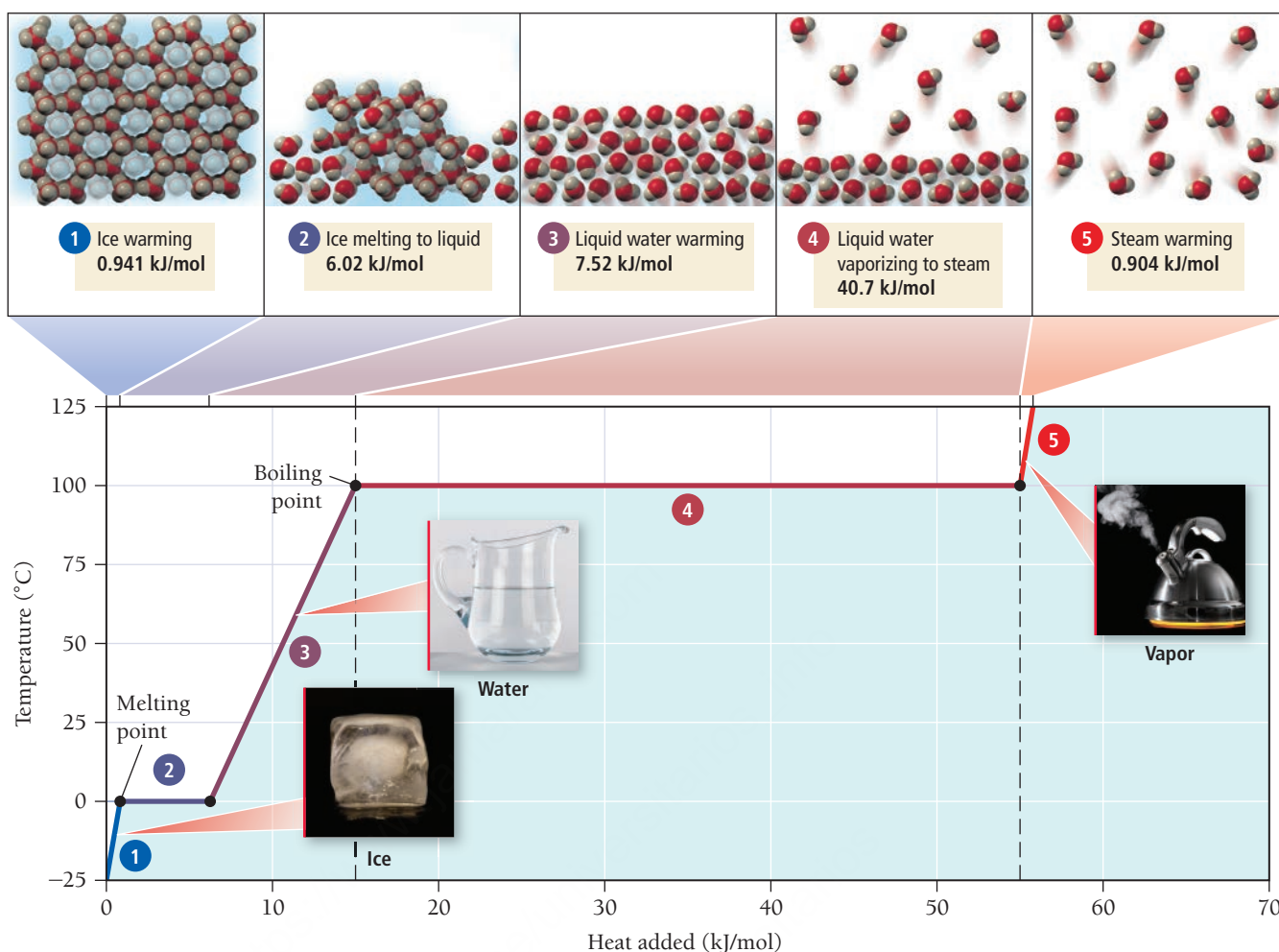
So in Segment 1, 0.941 kJ of heat is added to the ice, warming it from −25°C to 0°C.

▼ FIGURE 11.32 Heat of Fusion and Heat of Vaporization

Typical heats of fusion are significantly less than heats of vaporization.



PEARSON
eText
2.0
KEY CONCEPT VIDEO
Heating Curve for Water



▲ **FIGURE 11.33** Heating Curve for Water

Segment 2 In Segment 2, the added heat does not change the temperature of the ice and water mixture because the heat is absorbed by the transition from solid to liquid. The amount of heat required to convert the ice to liquid water is given by $q = n\Delta H_{\text{fus}}$, where n is the number of moles of water and ΔH_{fus} is the heat of fusion (see Section 11.6):

$$\begin{aligned} q &= n\Delta H_{\text{fus}} \\ &= 1.00 \text{ mol} \left(\frac{6.02 \text{ kJ}}{\text{mol}} \right) \\ &= 6.02 \text{ kJ} \end{aligned}$$

In Segment 2, 6.02 kJ is added to the ice, melting it into liquid water. Notice that the temperature does not change during melting. The liquid and solid coexist at 0°C as the melting occurs.

Segment 3 In Segment 3, the liquid water is warmed from 0°C to 100°C. Because no transition between states occurs here, the amount of heat required to heat the liquid water is given by $q = mC_s\Delta T$, as in Segment 1. However, now we use the heat capacity of liquid water (not ice) for the calculation. For 1.00 mol of water (18.0 g), we calculate the amount of heat as follows:

$$\begin{aligned} q &= mC_{s, \text{liq}}\Delta T \\ &= 18.0 \text{ g} \left(4.18 \frac{\text{J}}{\text{g} \cdot ^\circ\text{C}} \right) (100.0^\circ\text{C} - 0.0^\circ\text{C}) \\ &= 7.52 \times 10^3 \text{ J} = 7.52 \text{ kJ} \end{aligned}$$

In Segment 3, 7.52 kJ of heat is added to the liquid water, warming it from 0°C to 100°C.

Segment 4 In Segment 4, the water undergoes a second transition between states, this time from liquid to gas. The amount of heat required to convert the liquid to gas is given by $q = n\Delta H_{\text{vap}}$, where n is the number of moles and ΔH_{vap} is the heat of vaporization (see Section 11.5):

$$\begin{aligned} q &= n\Delta H_{\text{vap}} \\ &= 1.00 \text{ mol} \left(\frac{40.7 \text{ kJ}}{\text{mol}} \right) \\ &= 40.7 \text{ kJ} \end{aligned}$$

Thus, in Segment 4, 40.7 kJ is added to the water, vaporizing it into steam. Notice that the temperature does not change during boiling. The liquid and gas coexist at 100°C as the boiling occurs.

Segment 5 In Segment 5, the steam is warmed from 100°C to 125°C. Because no transition between states occurs here, the amount of heat required to heat the steam is given by $q = mC_s\Delta T$ (as in Segments 1 and 3) except that we use the heat capacity of steam (not water or ice) (2.01 J/g·°C):

$$\begin{aligned} q &= mC_{s, \text{steam}} \Delta T \\ &= 18.0 \text{ g} \left(2.01 \frac{\text{J}}{\text{g} \cdot ^\circ\text{C}} \right) (125.0^\circ\text{C} - 100.0^\circ\text{C}) \\ &= 904 = 0.904 \text{ kJ} \end{aligned}$$

In Segment 5, 0.904 kJ of heat is added to the steam, warming it from 100°C to 125°C.

Cooling of Water with Ice

You just saw that the heat capacity of ice is $C_{s, \text{ice}} = 2.09 \text{ J/g} \cdot ^\circ\text{C}$ and that the heat of fusion of ice is 6.02 kJ/mol. When a small ice cube at -10°C is put into a cup of water at room temperature, which of the following plays a greater role in cooling the liquid water: the warming of the ice from -10°C to 0°C , or the melting of the ice?

11.6
Cc

Conceptual
Connection

PEARSON
eText
2.0

11.8 Phase Diagrams

A **phase diagram** is a map of the state or *phase* of a substance as a function of pressure (on the y-axis) and temperature (on the x-axis). Let's first examine the major features of a phase diagram. Once we are familiar with these features, we can turn to navigating within a phase diagram, and finally examine and compare the phase diagrams of selected substances.

The Major Features of a Phase Diagram

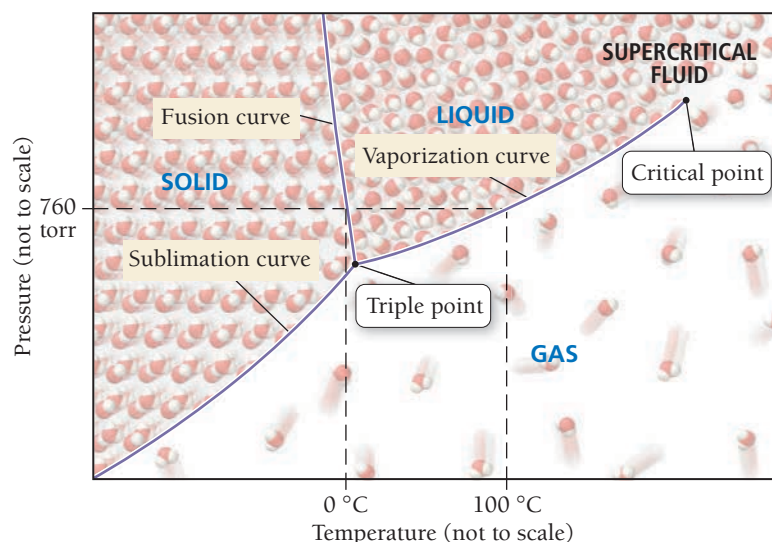
We can become familiar with the major features of a phase diagram by examining the phase diagram for water as an example (**Figure 11.34** ►). The y-axis displays the pressure in torr, and the x-axis displays the temperature in degrees Celsius. We categorize the main features of the phase diagram as regions, lines, and points.

Regions Any of the three main regions—solid, liquid, and gas—in the phase diagram represents conditions where that particular state is stable. For example, under any of the temperatures and pressures within the liquid region in the phase diagram of water, the liquid is the stable state. Notice that the point 25°C and 760 torr falls within the liquid region, as we know from everyday experience. In general, low temperature and

PEARSON
eText
2.0

KEY CONCEPT VIDEO
Phase Diagrams

Phase Diagram for Water



▲ **FIGURE 11.34** Phase Diagram for Water

high pressure favor the solid state, high temperature and low pressure favor the gas state, and intermediate conditions favor the liquid state. A sample of matter that is not in the state indicated by its phase diagram for a given set of conditions converts to that state when those conditions are imposed. For example, steam that is cooled to room temperature at 1 atm condenses to liquid.

Lines Each of the lines (or curves) in the phase diagram represents a set of temperatures and pressures at which the substance is in equilibrium between the two states on either side of the line. In the phase diagram for water, consider the curved line beginning just beyond 0°C that separates the liquid from the gas. This line is the *vaporization curve* (also called the vapor pressure curve) for water that we examined in Section 11.5. At any of the temperatures and pressures that fall along this line, the liquid and gas states of water are equally stable and in equilibrium. For example, at 100°C and 760 torr pressure, water and its vapor are in equilibrium—they are equally stable and coexist. The other two major lines in a phase diagram are the *sublimation curve* (separating the solid and the gas) and the *fusion curve* (separating the solid and the liquid).

The triple point of a substance such as water can be reproduced anywhere to calibrate a thermometer or pressure gauge with a known temperature and pressure.

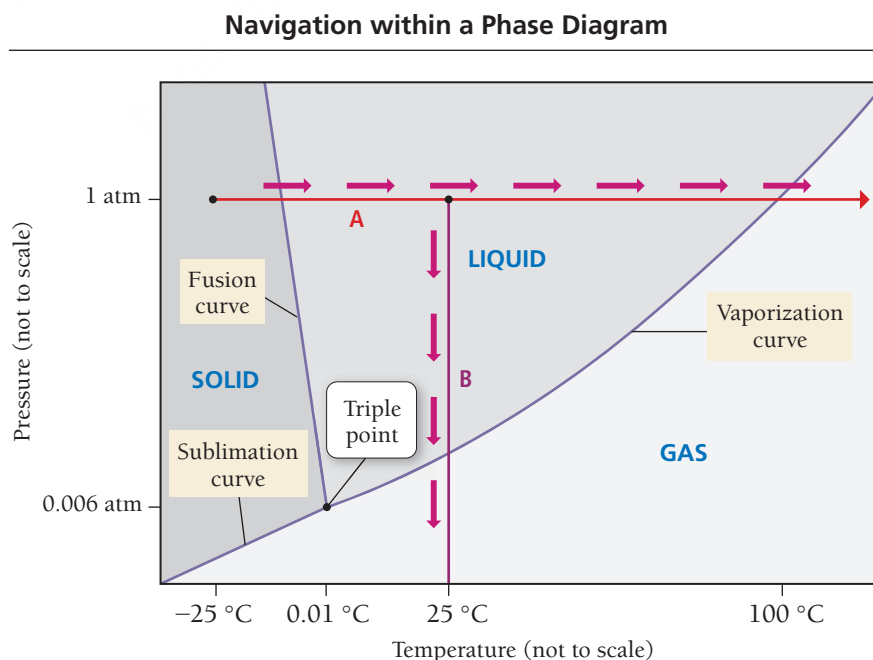
The Triple Point The **triple point** in a phase diagram represents the unique set of conditions at which the three states are equally stable and in equilibrium. In the phase diagram for water, the triple point occurs at 0.0098°C and 4.58 torr. Under these unique conditions (and only under these conditions), the solid, liquid, and gas states of water are equally stable and coexist in equilibrium.

The Critical Point As we discussed in Section 11.5, at the critical temperature and pressure, the liquid and gas states coalesce into a *supercritical fluid*. The **critical point** in a phase diagram represents the temperature and pressure above which a supercritical fluid exists.

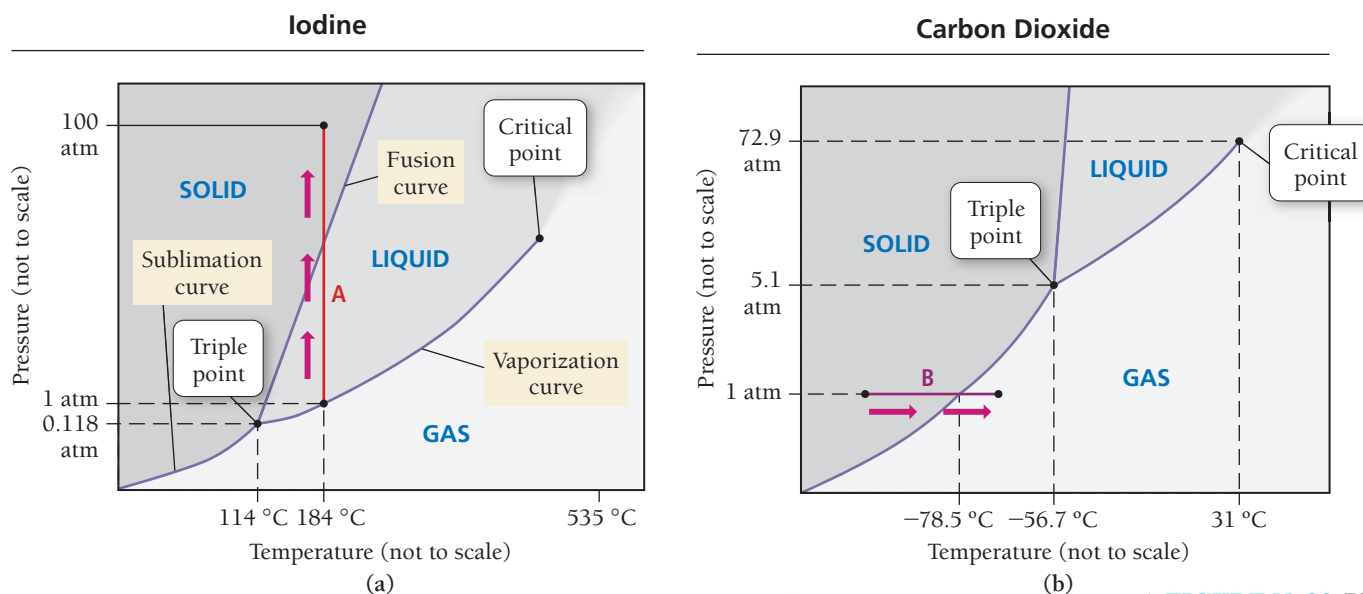
Navigation within a Phase Diagram

We represent changes in the temperature or pressure of a sample of water as movement within the phase diagram. For example, suppose we heat a block of ice initially at 1.0 atm and -25°C . We represent the change in temperature at constant pressure as movement along the horizontal line marked A in **Figure 11.35** ▼. As the temperature rises, we move to the right along the line. At the fusion curve, the temperature stops rising and melting occurs until the solid ice is completely converted to liquid water. Crossing the fusion curve requires the complete transition from solid to liquid. Once the ice has completely melted, the temperature of the liquid water begins to rise until the vaporization curve is reached. At this point, the temperature again stops rising, and boiling occurs until all the liquid is converted to gas.

We represent a change in pressure with a vertical line on the phase diagram. For example, suppose we lower the pressure above a sample of water initially at 1.0 atm and 25°C . We represent the change in pressure at constant temperature as movement along the line marked B in Figure 11.35. As the pressure



► **FIGURE 11.35** Navigating the Phase Diagram for Water



▲ FIGURE 11.36 Phase Diagrams for Other Substances (a) Iodine and (b) carbon dioxide.

drops, we move down the line and approach the vaporization curve. At the vaporization curve, the pressure stops dropping, and vaporization occurs until the liquid is completely converted to vapor. Crossing the vaporization curve requires the complete transition from liquid to gas. Only after all the liquid has vaporized does the pressure continue to drop. Notice that, for water, the fusion curve (the line separating the solid and the liquid) slopes to the left. This means that, as the pressure increases, the liquid state is favored over the solid. This behavior is unique to water.

The Phase Diagrams of Other Substances

Examine the phase diagrams of iodine and carbon dioxide, shown in **Figure 11.36 ▲**. These phase diagrams are similar to that of water in most of their general features, but some significant differences exist.

The fusion curves for both carbon dioxide and iodine have a positive slope—as the temperature increases, the pressure also increases—in contrast to the fusion curve for water, which has a negative slope. The behavior of water is atypical. The fusion curve within the phase diagrams for most substances has a positive slope because increasing pressure favors the denser state, which for most substances is the solid state. For example, suppose we increase the pressure on a sample of iodine from 1 atm to 100 atm at 184 °C. This change is represented by line A in Figure 11.36a. Notice that this change crosses the fusion curve, converting the liquid into a solid. In contrast, a pressure increase from 1 atm to 100 atm at -0.1°C in water causes a state transition from solid to liquid. Unlike most substances, the liquid state of water is actually denser than the solid state.

Both water and iodine have stable solid, liquid, and gaseous states at a pressure of 1 atm. Notice, however, that carbon dioxide has no stable liquid state at a pressure of 1 atm. If we increase the temperature of a block of solid carbon dioxide (dry ice) at 1 atm, as indicated by line B in Figure 11.36b, we cross the sublimation curve at -78.5°C . At this temperature, the solid sublimates to a gas. This is one reason that dry ice is useful; it does not melt into a liquid at atmospheric pressure. Carbon dioxide forms a liquid only above pressures of 5.1 atm.

Phase Diagrams

11.7
Cc

Conceptual
Connection

PEARSON
eText
2.0

The triple point for a substance occurs at -24.5°C and 225 mmHg. What is most likely to happen when this substance is warmed from -35°C to 0°C at a pressure of 220 mmHg?

- The solid will melt into a liquid.
- The solid will sublime into a gas.
- Nothing (the solid will remain a solid).

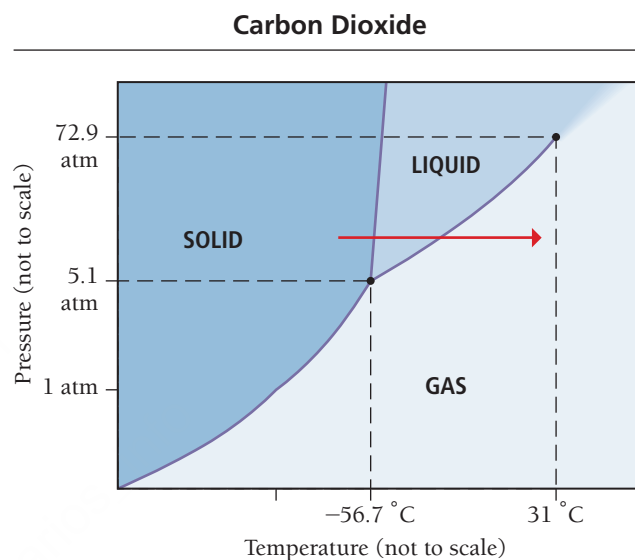
EXAMPLE 11.6**Navigation within a Phase Diagram**Interactive
Worked Example
Video 11.6PEARSON
eText
2.0

What state transitions occur when a sample of carbon dioxide at -60.0°C and 10.0 atm is warmed to 30.0°C and 10.0 atm?

SOLUTION

To solve this problem, draw a horizontal line on the phase diagram in Figure 11.36b beginning at -60°C and 10.0 atm and ending at 30.0°C and 10.0 atm.

Since the line begins in the solid region of the phase diagram, the sample is initially a solid. As the sample warms, it crosses the fusion curve and becomes a liquid. Continued warming causes it to cross the vaporization curve and become a gas. So the state transitions that occur are solid to liquid and liquid to gas.

**FOR PRACTICE 11.6**

Which state transitions occur in carbon dioxide if you begin with a sample of carbon dioxide at -60.0°C at 0.50 atm and warm the sample to 30.0°C and 0.50 atm?



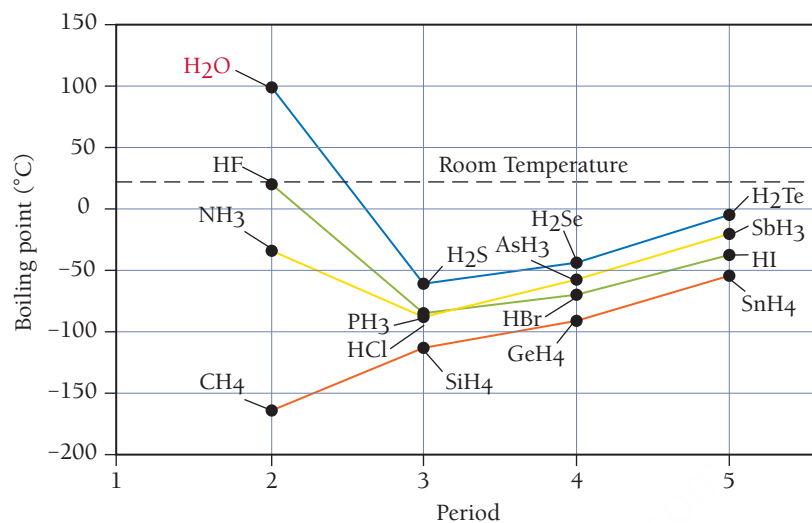
▲ The *Mars Curiosity Rover* has found evidence that liquid water (which could possibly sustain life) once existed on the surface of Mars.

11.9 Water: An Extraordinary Substance

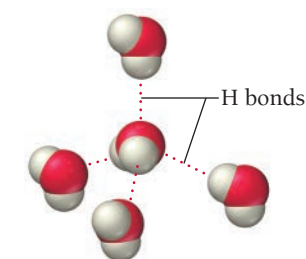
Water is the most common and important liquid on Earth. It fills our oceans, lakes, and streams. In its solid form, it caps our mountains, and in its gaseous form, it humidifies our air. We drink water, we sweat water, and we excrete bodily wastes dissolved in water. Indeed, the majority of our body mass is water. Life is impossible without water, and in most places on Earth where liquid water exists, life exists. Recent evidence for the past existence of water on Mars has fueled hopes of finding evidence of past life there. And though it may not be obvious to us (because we take water for granted), this familiar substance has many remarkable properties.

Among liquids, water is unique. It has a low molar mass (18.02 g/mol), yet it is a liquid at room temperature. Other main-group hydrides have higher molar masses but lower boiling points, as shown in **Figure 11.37** ▶. No other substance of similar molar mass (except HF) comes close to being a liquid at room temperature. We can understand water's high boiling point (in spite of its low molar mass) by examining its molecular structure. The bent geometry of the water molecule and the highly polar nature of the O—H bonds result in a molecule with a significant dipole moment. Water's two O—H bonds (hydrogen directly bonded to oxygen) allow each water molecule to form strong hydrogen bonds with four other water molecules (**Figure 11.38** ▶), resulting in a relatively high boiling point. Water's high polarity also allows it to dissolve many other polar and ionic compounds and even a number of nonpolar gases such as oxygen and carbon dioxide (by inducing a dipole moment in their molecules).

Water is the only common main-group hydride that is a liquid at room temperature.



▲ **FIGURE 11.37** Boiling Points of Main-Group Hydrides



▲ **FIGURE 11.38** Hydrogen Bonding in Water
A water molecule can form four strong hydrogen bonds with four other water molecules.

Consequently, water is the main solvent within living organisms, transporting nutrients and other important compounds throughout the body. Water is the main solvent in our environment as well, allowing aquatic animals, for example, to survive by breathing dissolved oxygen and allowing aquatic plants to survive by using dissolved carbon dioxide for photosynthesis (the process by which plants convert carbon dioxide and water in glucose).

We already saw in Section 9.4 that water has an exceptionally high specific heat capacity, which has a moderating effect on the climate of coastal cities. In some cities, such as San Francisco, for example, the daily fluctuation in temperature can be less than 10°C. This same moderating effect occurs over the entire planet, two-thirds of which is covered by water. Without water, the daily temperature fluctuations on Earth might be more like those on Mars, where temperature fluctuations of 63°C (113°F) occur between early morning and midday. Imagine awakening to below-freezing temperatures, only to bake at summer desert temperatures in the afternoon! The presence of water on Earth and water's uniquely high specific heat capacity are largely responsible for our planet's much smaller daily fluctuations.

The way that water freezes is also unique. Unlike other substances, which contract upon freezing, water expands upon freezing. Consequently, ice is less dense than liquid water, which is why ice floats. This seemingly trivial property has significant consequences. The frozen layer of ice at the surface of a winter lake insulates the water in the lake from further freezing. If this ice layer sank, it would kill bottom-dwelling aquatic life and possibly allow the lake to freeze solid, eliminating virtually all life in the lake.

The expansion of water upon freezing, however, is one reason that most organisms do not survive freezing. When the water within a cell freezes, it expands and often ruptures the cell, just as water freezing within a pipe bursts the pipe. Many foods, especially those with high water content, do not survive freezing very well either. Have you ever tried to freeze your own vegetables? If you put lettuce or spinach in the freezer, you will find that it is limp and damaged when you thaw it. The frozen-food industry gets around this problem by *flash freezing* vegetables and other foods. In this process, foods are frozen nearly instantaneously, which prevents water molecules from settling into their preferred crystalline structure. Consequently, the water does not expand very much, and the food remains largely undamaged.



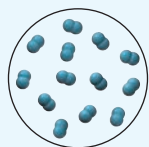
▲ When lettuce freezes, the water within its cells expands, rupturing them.

SELF-ASSESSMENT

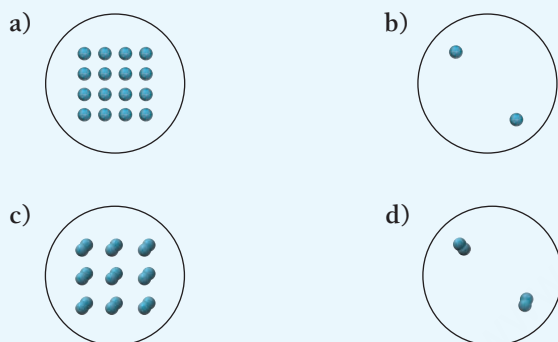
PEARSON
eText
2.0

QUIZ

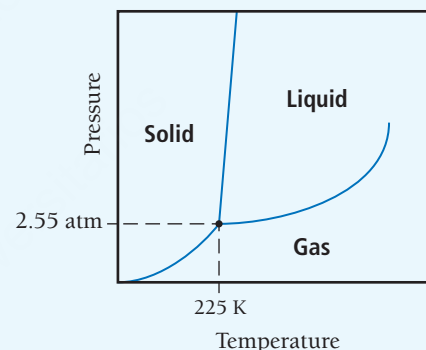
- Which state of matter is compressible?
a) gas b) liquid c) solid d) none of the above
- Liquid nitrogen boils at 77 K. This image depicts a sample of liquid nitrogen.



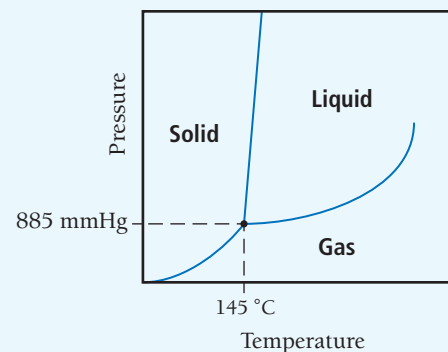
Which image best depicts the nitrogen after it has boiled?



- Taking intermolecular forces into account, which halogen would you expect to have the highest boiling point?
a) F_2 b) Cl_2 c) Br_2 d) I_2
- Which substance experiences dipole–dipole forces?
a) CCl_4 b) NF_3 c) CS_2 d) SO_3
- Which substance is a liquid at room temperature?
a) CH_3OH b) CF_4 c) SiH_4 d) CO_2
- Which property of a liquid increases with increasing temperature?
a) surface tension b) viscosity
c) vapor pressure d) none of the above
- Determine the amount of heat (in kJ) required to vaporize 1.55 kg of water at its boiling point. For water, $\Delta H_{vap} = 40.7 \text{ kJ/mol}$ (at 100°C).
a) $3.50 \times 10^3 \text{ kJ}$
b) $1.14 \times 10^6 \text{ kJ}$
c) 2.11 kJ
d) 686 kJ
- The vapor pressure of a substance is measured over a range of temperatures. A plot of the natural log of the vapor pressure versus the inverse of the temperature (in Kelvin) produces a straight line with a slope of $-3.46 \times 10^3 \text{ K}$. What is the enthalpy of vaporization of the substance?
a) $2.40 \times 10^{-3} \text{ kJ/mol}$
b) 28.8 kJ/mol
c) 0.416 kJ/mol
d) 3.22 kJ/mol
- Acetic acid has a normal boiling point of 118°C and a ΔH_{vap} of 23.4 kJ/mol. What is the vapor pressure (in mmHg) of acetic acid at 25°C ?
a) $2.92 \times 10^{-39} \text{ mmHg}$ b) $7.16 \times 10^3 \text{ mmHg}$
c) 758 mmHg d) 80.6 mmHg
- A mixture containing 21.4 g of ice (at exactly 0.00°C) and 75.3 g of water (at 55.3°C) is placed in an insulated container. Assuming no heat is lost to the surroundings, what is the final temperature of the mixture?
a) 22.5°C b) 25.4°C c) 32.6°C d) 41.9°C
- Which process releases the greatest amount of heat?
a) the condensation of 10 g of gaseous water
b) the freezing of 10 g of liquid water
c) the boiling of 10 g of liquid water
d) the melting of 10 g of ice
- Determine which state this substance is in at 1 atm and 298 K by referring to its phase diagram.



- solid
 - liquid
 - gas
 - all three states in equilibrium
- A sample of the substance in this phase diagram is initially at 175°C and 925 mmHg. Which phase transition occurs when the pressure is decreased to 760 mmHg at constant temperature?



- solid to liquid
- liquid to gas
- solid to gas
- liquid to solid

Answers: 1. a; 2. d; 3. d; 4. b; 5. a; 6. c; 7. a; 8. b; 9. d; 10. b; 11. a; 12. c; 13. b

CHAPTER SUMMARY

11

MasteringChemistry™ provides end-of-chapter exercises, feedback-enriched tutorial problems, animations, and interactive activities to encourage problem solving practice and deeper understanding of key concepts and topics.

REVIEW

KEY LEARNING OUTCOMES

CHAPTER OBJECTIVES	ASSESSMENT
Determine Whether a Molecule Has Dipole–Dipole Forces (11.3)	• Example 11.1 For Practice 11.1 Exercises 35–38
Determine Whether a Molecule Displays Hydrogen Bonding (11.3)	• Example 11.2 For Practice 11.2 Exercises 35–38
Use the Heat of Vaporization in Calculations (11.5)	• Example 11.3 For Practice 11.3 For More Practice 11.3 Exercises 57–60
Use the Clausius–Clapeyron Equation (11.5)	• Examples 11.4, 11.5 For Practice 11.4, 11.5 Exercises 61–64
Navigate Within a Phase Diagram (11.8)	• Example 11.6 For Practice 11.6 Exercises 71, 72, 75, 76

KEY TERMS

Section 11.2

crystalline (465)
amorphous (465)

Section 11.3

dispersion force
(London force) (467)
dipole–dipole force (470)
permanent dipole (470)
miscibility (471)
hydrogen bonding (472)
hydrogen bond (473)
ion–dipole force (475)

Section 11.4

surface tension (476)
viscosity (477)
capillary action (477)

Section 11.5

vaporization (479)
condensation (479)
volatile (479)
nonvolatile (479)
heat (or enthalpy) of vaporization
(ΔH_{vap}) (480)

dynamic equilibrium (481)
vapor pressure (481)
boiling point (483)
normal boiling point (483)
Clausius–Clapeyron
equation (484)
critical temperature (T_c) (487)
critical pressure (P_c) (487)

Section 11.6

sublimation (487)
deposition (487)

melting point (488)
melting (fusion) (488)
freezing (488)
heat of fusion (ΔH_{fus}) (488)

Section 11.8

phase diagram (491)
triple point (492)
critical point (492)

KEY CONCEPTS

Solids, Liquids, and Intermolecular Forces (11.1, 11.2, 11.3)

- The forces that hold molecules or atoms together in a liquid or solid are intermolecular forces. The strength of the intermolecular forces in a substance determines its state.
- Dispersion forces are present in all elements and compounds; they arise from the fluctuations in electron distribution within atoms and molecules. Dispersion forces are the weakest intermolecular forces, but they are significant in molecules with high molar masses.
- Dipole–dipole forces, generally stronger than dispersion forces, are present in all polar molecules.
- Hydrogen bonding occurs in polar molecules that contain hydrogen atoms bonded directly to fluorine, oxygen, or nitrogen. These are the strongest intermolecular forces.
- Ion–dipole forces occur when ionic compounds are mixed with polar compounds; they are especially important in aqueous solutions.

Surface Tension, Viscosity, and Capillary Action (11.4)

- Surface tension results from the tendency of liquids to minimize their surface area in order to maximize the interactions between their particles, thus lowering potential energy. Surface tension causes water droplets to form spheres and allows insects and paper clips to temporarily float on the surface of water.

- Viscosity is the resistance of a liquid to flow. Viscosity increases with increasing strength of intermolecular forces and decreases with increasing temperature.
- Capillary action is the ability of a liquid to flow against gravity up a narrow tube. It is the result of adhesive forces, the attraction between the molecules and the surface of the tube, and cohesive forces, the attraction between the molecules in the liquid.

Vaporization and Vapor Pressure (11.5, 11.7)

- Vaporization, the transition from liquid to gas, occurs when thermal energy overcomes the intermolecular forces present in a liquid. The opposite process is condensation. Vaporization is endothermic, and condensation is exothermic.
- The rate of vaporization increases with increasing temperature, increasing surface area, and decreasing strength of intermolecular forces.
- The heat of vaporization (ΔH_{vap}) is the heat required to vaporize one mole of a liquid.
- In a sealed container, a solution and its vapor come into dynamic equilibrium, at which point the rate of vaporization equals the rate of condensation. The pressure of a gas that is in dynamic equilibrium with its liquid is its vapor pressure.
- The vapor pressure of a substance increases with increasing temperature and with decreasing strength of its intermolecular forces.

- The boiling point of a liquid is the temperature at which its vapor pressure equals the external pressure.
- The Clausius–Clapeyron equation expresses the relationship between the vapor pressure of a substance and its temperature, and we can use it to calculate the heat of vaporization from experimental measurements.
- When a liquid is heated in a sealed container, it eventually forms a supercritical fluid, which has properties intermediate between a liquid and a gas. This occurs at the critical temperature and critical pressure.

Fusion and Sublimation (11.6, 11.7)

- Sublimation is the transition from solid to gas. The opposite process is deposition.
- Fusion, or melting, is the transition from solid to liquid. The opposite process is freezing.
- The heat of fusion (ΔH_{fus}) is the amount of heat required to melt one mole of a solid. Fusion is endothermic.
- The heat of fusion is generally less than the heat of vaporization because intermolecular forces do not have to be completely overcome for melting to occur.

KEY EQUATIONS AND RELATIONSHIPS

Clausius–Clapeyron Equation: Relationship between Vapor Pressure (P_{vap}), the Heat of Vaporization (ΔH_{vap}), and Temperature (T) (11.5)

$$\ln P_{\text{vap}} = \frac{-\Delta H_{\text{vap}}}{RT} + \ln \beta \quad (\beta \text{ is a constant})$$

$$\ln \frac{P_2}{P_1} = \frac{-\Delta H_{\text{vap}}}{R} \left(\frac{1}{T_2} - \frac{1}{T_1} \right)$$

Phase Diagrams (11.8)

- A phase diagram is a map of the states of a substance as a function of its pressure (y-axis) and temperature (x-axis).
- The regions in a phase diagram represent conditions under which a single stable state (solid, liquid, gas) exists.
- The lines in a phase diagram represent conditions under which two states are in equilibrium.
- The triple point represents the conditions under which all three states coexist.
- The critical point is the temperature and pressure above which a supercritical fluid exists.

The Uniqueness of Water (11.9)

- Water is a liquid at room temperature despite its low molar mass. Water forms strong hydrogen bonds and therefore has a high boiling point.
- The polarity of water enables it to dissolve many polar and ionic compounds and even nonpolar gases.
- Water expands upon freezing, so ice is less dense than liquid water.
- Water is critical both to the existence of life and to human health.

EXERCISES

REVIEW QUESTIONS

1. Why do ethanol and dimethyl ether have such different properties even though they have the same chemical formula?
2. Why are intermolecular forces important?
3. What are the key properties of liquids (in contrast to gases and solids)?
4. What are the key properties of solids (in contrast to liquids and gases)?
5. What is the fundamental difference between an amorphous solid and a crystalline solid?
6. Which factors cause transitions between the solid and liquid state? The liquid and gas state?
7. Describe the relationship between the state of a substance, its temperature, and the strength of its intermolecular forces.
8. From which kinds of interactions do intermolecular forces originate?
9. Why are intermolecular forces generally much weaker than bonding forces?
10. What is the dispersion force? What does the magnitude of the dispersion force depend on? How can we predict the magnitude of the dispersion force for closely related elements or compounds?
11. What is the dipole–dipole force? How can we predict the presence of dipole–dipole forces in a compound?
12. How is the miscibility of two liquids related to their polarity?
13. What is hydrogen bonding? How can we predict the presence of hydrogen bonding in a compound?
14. What is the ion–dipole force? Why is it important?
15. What is surface tension? How does surface tension result from intermolecular forces? How is it related to the strength of intermolecular forces?
16. What is viscosity? How does viscosity depend on intermolecular forces? What other factors affect viscosity?
17. What is capillary action? How does it depend on the relative strengths of adhesive and cohesive forces?
18. Explain what happens during the processes of vaporization and condensation. Why does the rate of vaporization increase with increasing temperature and surface area?
19. Why is vaporization endothermic? Why is condensation exothermic?
20. How is the volatility of a substance related to the intermolecular forces present within the substance?
21. What is the heat of vaporization for a liquid, and why is it useful?
22. Explain the process of dynamic equilibrium. How is dynamic equilibrium related to vapor pressure?
23. What happens to a system in dynamic equilibrium when it is disturbed in some way?
24. How is vapor pressure related to temperature? What happens to the vapor pressure of a substance when the temperature is increased? Decreased?

25. Define the terms *boiling point* and *normal boiling point*.
26. What is the Clausius–Clapeyron equation, and why is it important?
27. Explain what happens to a substance when it is heated in a closed container to its critical temperature.
28. What is sublimation? Cite a common example of sublimation.
29. What is fusion? Is fusion exothermic or endothermic? Why?
30. What is the heat of fusion, and why is it important?
31. Examine the heating curve for water in Section 11.7 (Figure 11.33). Explain why the curve has two segments in which heat is added to the water but the temperature does not rise.
32. Examine the heating curve for water in Section 11.7 (Figure 11.33). Explain the significance of the slopes of each of the three rising segments. Why are the slopes different?
33. What is a phase diagram? What is the significance of crossing a line in a phase diagram?
34. Draw a generic phase diagram and label its important features.

PROBLEMS BY TOPIC

Note: Answers to all odd-numbered Problems, numbered in blue, can be found in Appendix III. Exercises in the Problems by Topic section are paired, with each odd-numbered problem followed by a similar even-numbered problem. Exercises in the Cumulative Problems section are also paired but more loosely. Because of their nature, Challenge Problems and Conceptual Problems are unpaired.


Intermolecular Forces

35. Determine the kinds of intermolecular forces that are present in each element or compound.
 - a. N_2 b. NH_3 c. CO d. CCl_4
36. Determine the kinds of intermolecular forces that are present in each element or compound.
 - a. Kr b. NCl_3 c. SiH_4 d. HF
37. Determine the kinds of intermolecular forces that are present in each element or compound.
 - a. HCl b. H_2O c. Br_2 d. He
38. Determine the kinds of intermolecular forces that are present in each element or compound.
 - a. PH_3 b. HBr c. CH_3OH d. I_2
39. Arrange these compounds in order of increasing boiling point. Explain your reasoning.
 - a. CH_4 b. CH_3CH_3 c. $\text{CH}_3\text{CH}_2\text{Cl}$ d. $\text{CH}_3\text{CH}_2\text{OH}$
40. Arrange these compounds in order of increasing boiling point. Explain your reasoning.
 - a. H_2S b. H_2Se c. H_2O
41. Pick the compound with the highest boiling point in each pair. Explain your reasoning.
 - a. CH_3OH or CH_3SH b. CH_3OCH_3 or $\text{CH}_3\text{CH}_2\text{OH}$
 - c. CH_4 or CH_3CH_3
42. Pick the compound with the highest boiling point in each pair. Explain your reasoning.
 - a. NH_3 or CH_4 b. CS_2 or CO_2 c. CO_2 or NO_2
43. In each pair of compounds, pick the one with the higher vapor pressure at a given temperature. Explain your reasoning.
 - a. Br_2 or I_2 b. H_2S or H_2O c. NH_3 or PH_3
44. In each pair of compounds, pick the one with the higher vapor pressure at a given temperature. Explain your reasoning.
 - a. CH_4 or CH_3Cl b. $\text{CH}_3\text{CH}_2\text{CH}_2\text{OH}$ or CH_3OH
 - c. CH_3OH or H_2CO
45. Determine if each pair of compounds forms a homogeneous solution when combined. For those that form homogeneous solutions, indicate the type of forces that are involved.
 - a. CCl_4 and H_2O b. KCl and H_2O
 - c. Br_2 and CCl_4 d. $\text{CH}_3\text{CH}_2\text{OH}$ and H_2O

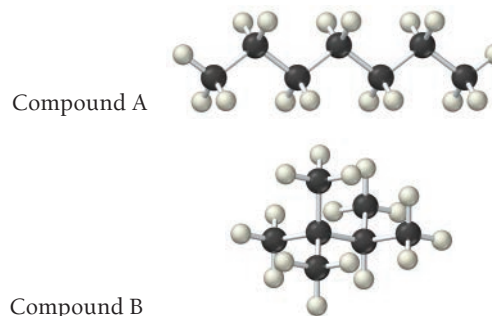
46. Determine if each pair of compounds forms a homogeneous solution when combined. For those that form homogeneous solutions, indicate the type of forces that are involved.
 - a. $\text{CH}_3\text{CH}_2\text{CH}_2\text{CH}_2\text{CH}_3$ and $\text{CH}_3\text{CH}_2\text{CH}_2\text{CH}_2\text{CH}_2\text{CH}_3$
 - b. CBr_4 and H_2O
 - c. LiNO_3 and H_2O
 - d. CH_3OH and $\text{CH}_3\text{CH}_2\text{CH}_2\text{CH}_2\text{CH}_3$

Surface Tension, Viscosity, and Capillary Action

47. Which compound would you expect to have greater surface tension: acetone $[(\text{CH}_3)_2\text{CO}]$ or water (H_2O)? Explain.
48. Water (a) “wets” some surfaces and beads up on others. Mercury (b), in contrast, beads up on almost all surfaces. Explain this difference.




49. The structures of two isomers of heptane are shown here. Which of these two compounds would you expect to have the greater viscosity?



50. The viscosity of a multigrade motor oil (such as one rated 10W-40) is less temperature dependent than the viscosities of most substances. These oils contain polymers (long molecules composed of repeating units) that coil up at low temperatures but unwind at higher temperatures. Explain how the addition of these polymers to the motor oil might make the viscosity less temperature dependent than a normal liquid.

51. Water in a glass tube that contains grease or oil residue displays a flat meniscus (the tube on the left in the accompanying photo), whereas water in a clean glass tube displays a concave meniscus (the tube on the right). Explain this observation.



52. When a thin glass tube is put into water, the water rises 1.4 cm. When the same tube is put into hexane, the hexane rises only 0.4 cm. Explain.

Vaporization and Vapor Pressure

53. Which evaporates more quickly: 55 mL of water in a beaker with a diameter of 4.5 cm or 55 mL of water in a dish with a diameter of 12 cm? Is the vapor pressure of the water different in the two containers? Explain.
54. Which evaporates more quickly: 55 mL of water (H_2O) in a beaker or 55 mL of acetone [$(\text{CH}_3)_2\text{CO}$] in an identical beaker under identical conditions? Is the vapor pressure of the two substances different? Explain.
55. Spilling room-temperature water over your skin on a hot day cools you down. Spilling room-temperature vegetable oil over your skin on a hot day does not. Explain the difference.
56. Why is the heat of vaporization of water greater at room temperature than it is at its boiling point?
57. The human body obtains 915 kJ of energy from a candy bar. If this energy were used to vaporize water at 100°C , how much water (in liters) could be vaporized? (Assume the density of water is 1.00 g/mL .)
58. A 100.0 mL sample of water is heated to its boiling point. How much heat (in kJ) is required to vaporize it? (Assume a density of 1.00 g/mL .)
59. Suppose that 0.95 g of water condenses on a 75.0 g block of iron that is initially at 22°C . If the heat released during condensation is used only to warm the iron block, what is the final temperature (in $^\circ\text{C}$) of the iron block? (Assume a constant enthalpy of vaporization for water of 44.0 kJ/mol .)
60. Suppose that 1.15 g of rubbing alcohol ($\text{C}_3\text{H}_8\text{O}$) evaporates from a 65.0 g aluminum block. If the aluminum block is initially at 25°C , what is the final temperature of the block after the evaporation of the alcohol? Assume that the heat required for the vaporization of the alcohol comes only from the aluminum block and that the alcohol vaporizes at 25°C .
61. This table displays the vapor pressure of ammonia at several different temperatures. Use the data to determine the heat of vaporization and normal boiling point of ammonia.

Temperature (K)	Pressure (torr)
200	65.3
210	134.3
220	255.7
230	456.0
235	597.0

62. This table displays the vapor pressure of nitrogen at several different temperatures. Use the data to determine the heat of vaporization and normal boiling point of nitrogen.

Temperature (K)	Pressure (torr)
65	130.5
70	289.5
75	570.8
80	1028
85	1718

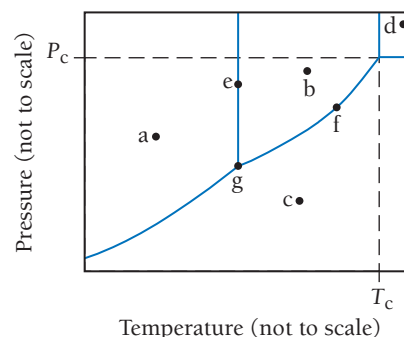
63. Ethanol has a heat of vaporization of 38.56 kJ/mol and a normal boiling point of 78.4°C . What is the vapor pressure of ethanol at 15°C ?
64. Benzene has a heat of vaporization of 30.72 kJ/mol and a normal boiling point of 80.1°C . At what temperature does benzene boil when the external pressure is 445 torr ?

Sublimation and Fusion

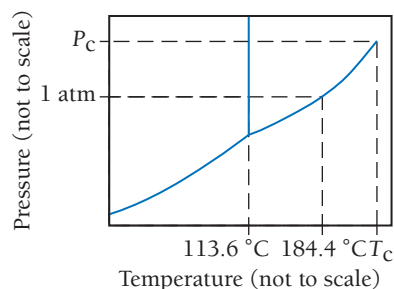
65. How much energy is released when 65.8 g of water freezes?
66. Calculate the amount of heat required to completely sublime 50.0 g of solid dry ice (CO_2) at its sublimation temperature. The heat of sublimation for carbon dioxide is 32.3 kJ/mol .
67. An 8.5 g ice cube is placed into 255 g of water. Calculate the temperature change in the water upon the complete melting of the ice. Assume that all of the energy required to melt the ice comes from the water.
68. How much ice (in grams) would have to melt to lower the temperature of 352 mL of water from 25°C to 5°C ? (Assume the density of water is 1.0 g/mL .)
69. How much heat (in kJ) is required to warm 10.0 g of ice, initially at -10.0°C , to steam at 110.0°C ? The heat capacity of ice is $2.09\text{ J/g}\cdot^\circ\text{C}$, and that of steam is $2.01\text{ J/g}\cdot^\circ\text{C}$.
70. How much heat (in kJ) is evolved in converting 1.00 mol of steam at 145°C to ice at -50°C ? The heat capacity of steam is $2.01\text{ J/g}\cdot^\circ\text{C}$, and that of ice is $2.09\text{ J/g}\cdot^\circ\text{C}$.

Phase Diagrams

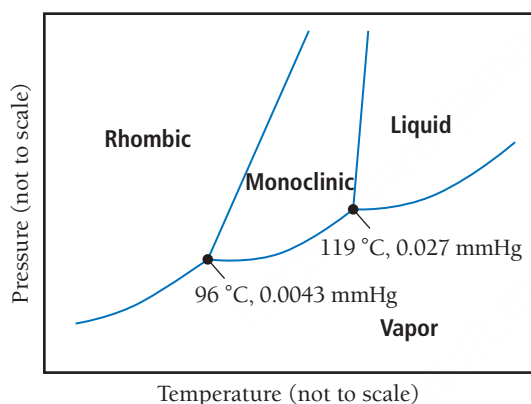
71. Identify the states present at points *a* through *g* in the phase diagram shown here.



72. Consider the phase diagram for iodine shown at the top of the next page.
- What is the normal boiling point for iodine?
 - What is the melting point for iodine at 1 atm ?
 - Which state is present at room temperature and normal atmospheric pressure?
 - Which state is present at 186°C and 1.0 atm ?

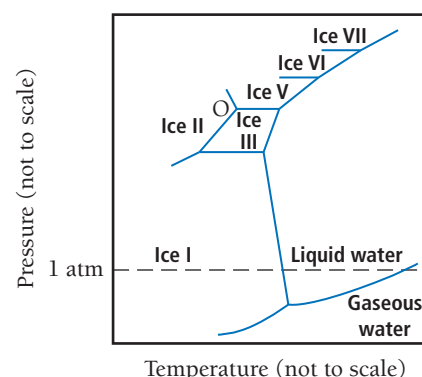


73. Nitrogen has a normal boiling point of 77.3 K and a melting point (at 1 atm) of 63.1 K. Its critical temperature is 126.2 K, and its critical pressure is 2.55×10^4 torr. It has a triple point at 63.1 K and 94.0 torr. Sketch the phase diagram for nitrogen. Does nitrogen have a stable liquid state at 1 atm?
74. Argon has a normal boiling point of 87.2 K and a melting point (at 1 atm) of 84.1 K. Its critical temperature is 150.8 K, and its critical pressure is 48.3 atm. It has a triple point at 83.7 K and 0.68 atm. Sketch the phase diagram for argon. Which has the greater density, solid argon or liquid argon?
75. Consider the phase diagram for sulfur shown here. The rhombic and monoclinic states are two solid states with different structures.



- a. Below what pressure does solid sulfur sublime?
b. Which of the two solid states of sulfur is most dense?

76. The high-pressure phase diagram of ice is shown here. Notice that, under high pressure, ice can exist in several different solid forms. Which three forms of ice are present at the triple point marked O? What is the density of ice II compared to ice I (the familiar form of ice)? Would ice III sink or float in liquid water?



The Uniqueness of Water

77. Water has a high boiling point given its relatively low molar mass. Explain.
78. Water is a good solvent for many substances. What is the molecular basis for this property, and why is it significant?
79. Explain the role water plays in moderating Earth's climate.
80. How is the density of solid water compared to that of liquid water atypical among substances? Why is this significant?

CUMULATIVE PROBLEMS

81. Explain the observed trend in the melting points of the hydrogen halides.

HI	-50.8 °C
HBr	-88.5 °C
HCl	-114.8 °C
HF	-83.1 °C

82. Explain the observed trend in the boiling points of these compounds.

H ₂ Te	-2 °C
H ₂ Se	-41.5 °C
H ₂ S	-60.7 °C
H ₂ O	100 °C

83. The vapor pressure of water at 25 °C is 23.76 torr. If 1.25 g of water is enclosed in a 1.5 L container, is any liquid present? If so, what is the mass of the liquid?
84. The vapor pressure of CCl₃F at 300 K is 856 torr. If 11.5 g of CCl₃F is enclosed in a 1.0 L container, is any liquid present? If so, what is the mass of the liquid?
85. Four ice cubes at exactly 0 °C with a total mass of 53.5 g are combined with 115 g of water at 75 °C in an insulated container.

If no heat is lost to the surroundings, what is the final temperature of the mixture?

86. A sample of steam with a mass of 0.552 g at a temperature of 100 °C condenses into an insulated container holding 4.25 g of water at 5.0 °C. Assuming that no heat is lost to the surroundings, what is the final temperature of the mixture?
87. Draw a heating curve (such as the one in Figure 11.33) for 1 mole of methanol beginning at 170 K and ending at 350 K. Assume that the values given here are constant over the relevant temperature ranges.

Melting point	176 K
Boiling point	338 K
ΔH_{fus}	2.2 kJ/mol
ΔH_{vap}	35.2 kJ/mol
$C_{\text{s, solid}}$	105 J/mol · K
$C_{\text{s, liquid}}$	81.3 J/mol · K
$C_{\text{s, gas}}$	48 J/mol · K

88. Draw a heating curve (such as the one in Figure 11.33) for 1 mol of benzene beginning at 0°C and ending at 100°C. Assume that the values given here are constant over the relevant temperature ranges.

Melting point	5.4°C
Boiling point	90.1°C
ΔH_{fus}	9.9 kJ/mol
ΔH_{vap}	30.7 kJ/mol
$C_{\text{s, solid}}$	118 J/mol · K
$C_{\text{s, liquid}}$	135 J/mol · K
$C_{\text{s, gas}}$	104 J/mol · K

CHALLENGE PROBLEMS

91. Two liquids, A and B, have vapor pressures at a given temperature of 24 mmHg and 36 mmHg, respectively. We prepare solutions of A and B at a given temperature and measure the total pressures above the solutions. We obtain these data:

Solution	Amt A (mol)	Amt B (mol)	P (mmHg)
1	1	1	30
2	2	1	28
3	1	2	32
4	1	3	33

Predict the total pressure above a solution of 5 mol A and 1 mol B.

92. Butane (C_4H_{10}) has a heat of vaporization of 22.44 kJ/mol and a normal boiling point of -0.4°C . A 250.0 mL sealed flask contains 0.55 g of butane at -22°C . How much liquid butane is present? If the butane is warmed to 25°C , how much liquid butane is present?
93. Liquid nitrogen can be used as a cryogenic substance to obtain low temperatures. Under atmospheric pressure, liquid nitrogen boils at

89. Air conditioners not only cool air but dry it as well. A room in a home measures 6.0 m \times 10.0 m \times 2.2 m. If the outdoor temperature is 30°C and the vapor pressure of water in the air is 85% of the vapor pressure of water at this temperature, what mass of water must be removed from the air each time the volume of air in the room cycles through the air conditioner? The vapor pressure for water at 30°C is 31.8 torr.
90. A sealed flask contains 0.55 g of water at 28°C . The vapor pressure of water at this temperature is 28.36 mmHg. What is the minimum volume of the flask in order that there is no liquid water present in the flask?

77 K, allowing low temperatures to be reached. However, if the nitrogen is placed in a sealed, insulated container connected to a vacuum pump, even lower temperatures can be reached. Why? If the vacuum pump has sufficient capacity and is left on for an extended period of time, the liquid nitrogen starts to freeze. Explain.

94. Given that the heat of fusion of water is -6.02 kJ/mol, the heat capacity of $\text{H}_2\text{O}(l)$ is 75.2 J/mol · K, and the heat capacity of $\text{H}_2\text{O}(s)$ is 37.7 J/mol · K, calculate the heat of fusion of water at -10°C .
95. The heat of combustion of CH_4 is 890.4 kJ/mol, and the heat capacity of H_2O is 75.2 J/mol · K. Find the volume of methane measured at 298 K and 1.00 atm required to convert 1.00 L of water at 298 K to water vapor at 373 K.
96. Three 1.0-L flasks, maintained at 308 K, are connected to each other with stopcocks. Initially, the stopcocks are closed. One of the flasks contains 1.0 atm of N_2 ; the second, 2.0 g of H_2O ; and the third, 0.50 g of ethanol, $\text{C}_2\text{H}_6\text{O}$. The vapor pressure of H_2O at 308 K is 42 mmHg, and that of ethanol is 102 mmHg. When the stopcocks are opened and the contents mix freely, what is the pressure?

CONCEPTUAL PROBLEMS

97. One prediction of global warming is the melting of global ice, which may result in coastal flooding. A criticism of this prediction is that the melting of icebergs does not increase ocean levels any more than the melting of ice in a glass of water increases the level of liquid in the glass. Is this a valid criticism? Does the melting of an ice cube in a cup of water raise the level of the liquid in the cup? Why or why not? In response to this criticism, scientists have asserted that they are not worried about melting icebergs, but rather the melting of ice sheets that sit on the continent of Antarctica. Would the melting of this ice increase ocean levels? Why or why not?
98. The rate of vaporization depends on the surface area of the liquid. However, the vapor pressure of a liquid does not depend on the surface area. Explain.
99. Substance A has a smaller heat of vaporization than substance B. Which of the two substances undergoes a larger change in vapor pressure for a given change in temperature?
100. A substance has a heat of vaporization of ΔH_{vap} and heat of fusion of ΔH_{fus} . Express the heat of sublimation in terms of ΔH_{vap} and ΔH_{fus} .
101. Examine the heating curve for water in Section 11.7 (Figure 11.33). If heat is added to the water at a constant rate, which of the three segments in which temperature is rising will have the least steep slope? Why?
102. A root cellar is an underground chamber used to store fruits, vegetables, and sometimes meats. In extreme cold, farmers put

large vats of water into the root cellar to prevent fruits and vegetables from freezing. Explain why this works.

103. Suggest an explanation for the observation that the heat of fusion of a substance is always smaller than its heat of vaporization.
104. Refer to Figure 11.33 to answer each question.
- A sample of steam begins on the line segment labeled 5 on the graph. Is heat absorbed or released in moving from the line segment labeled 5 to the line segment labeled 3? What is the sign of q for this change?
 - In moving from left to right along the line segment labeled 2 on the graph, heat is absorbed, but the temperature remains constant. Where does the heat go?
 - How would the graph change if it were for another substance (other than water)?
105. The following image is an electrostatic potential map for ethylene oxide, $(\text{CH}_2)_2\text{O}$, a polar molecule. Use the electrostatic potential map to predict the geometry for how one ethylene oxide molecule interacts with another. Draw structural formulas, using the three-dimensional bond notation introduced in Section 5.9, to show the geometry of the interaction.
106. A substance has a triple point at a temperature of 17°C and a pressure of 3.2 atmospheres. In which states can the substance exist on the surface of Earth at sea level (open to the atmosphere)?



QUESTIONS FOR GROUP WORK

Active Classroom Learning

Discuss these questions with the group and record your consensus answer.

107. The boiling points of three compounds are tabulated here.

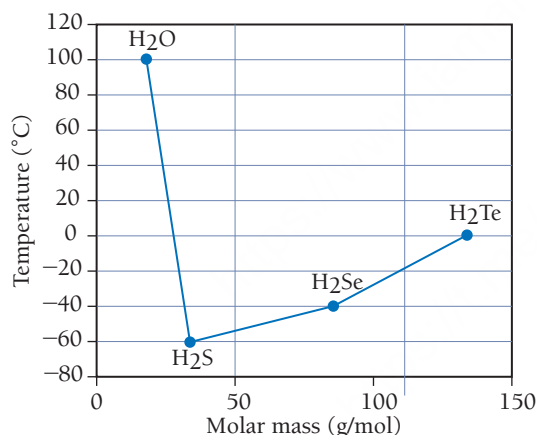
	Molar Mass	Boiling Point
2-hexanone	100.16	128°C
heptane	100.20	98°C
1-hexanol	102.17	156°C

Answer the following questions without looking up the structures for these molecules: Which compound experiences hydrogen bonding? Which compound is polar but does not experience hydrogen bonding? Which is neither polar nor capable of hydrogen bonding? Explain your answers.

108. The vapor pressure for pure water and pure acetone is measured as a function of temperature. In each case, a graph of the log of the vapor pressure versus $1/T$ is found to be a straight line. The slope of the line for water is -4895 K , and the slope of the line for acetone is -6748 K . Determine ΔH_{vap} for each substance. Account for the difference by discussing the molecular structure of the two molecules.
109. Based on the heating curve for water, does it take more energy to melt a mole of water or to boil a mole of water? Does it take more energy to warm the solid, the liquid, or the gas by 10°C ? Explain your answers clearly.
110. Sketch the phase diagram for carbon dioxide. If you have carbon dioxide at 1.0 atm and 25°C , could you turn it into a liquid by cooling it down? How could you make it a liquid at 25°C ? If you increase the pressure of carbon dioxide that is at body temperature (37°C), will it ever liquefy?

DATA INTERPRETATION AND ANALYSIS

111. We have seen that molar mass and molecular structure influence the boiling point. We can see these two factors at work in the boiling points of the Group 6A hydrides shown in the graph.



▲ Boiling Point versus Molar Mass for Group 6A Hydrides

In order to disentangle the effects of molar mass and molecular structure on boiling point, consider the data in the table.

Compound	Molar Mass	n -Boiling Point ($^\circ\text{C}$)	Dipole Moment (D)	Polarizability (10^{-24} cm^3)
H_2O	18.01	100	1.85	1.45
H_2S	34.08	-60	1.10	3.81
H_2Se	80.98	-42.2	0.41	4.71
H_2Te	129.6	-2.2	0.22	5.01

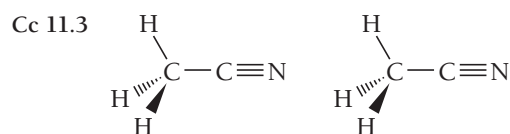
Use the information in the graph and the table to answer the questions.

- Does molar mass alone correlate with the trend in the boiling points for the Group 6A hydrides?
- Which boiling points in the graph correlate with polarizability? Which type of intermolecular force correlates with polarizability?
- Use the data in the table to explain the anomalously high boiling point of water.

ANSWERS TO CONCEPTUAL CONNECTIONS

Cc 11.1 (a) When water boils, it simply changes state from liquid to gas. Water molecules do not decompose during boiling.

Cc 11.2 (c) I_2 has the highest boiling point because it has the highest molar mass. Because the halogens are all similar in other ways, you would expect I_2 to have the greatest dispersion forces and therefore the highest boiling point (and in fact it does).



Cc 11.4 (a) CH_3OH . The compounds all have similar molar masses, so the dispersion forces are similar in all three. CO is polar, but because CH_3OH contains H directly bonded to O, it has hydrogen bonding, resulting in the highest boiling point.

Cc 11.5 (b) Although the *rate of vaporization* increases with increasing surface area, the *vapor pressure* of a liquid is independent of surface area. An increase in surface area increases both the rate of vaporization and the rate of condensation—the effects exactly cancel, and the vapor pressure does not change.

Cc 11.6 The warming of the ice from -10°C to 0°C absorbs only 20.9 J/g of ice. The melting of the ice, however, absorbs about 334 J/g of ice. (You can obtain this value by dividing the heat of fusion of water by its molar mass.) Therefore, the melting of the ice produces a larger temperature decrease in the water than the warming of the ice.

Cc 11.7 (b) The solid will sublime into a gas. Since the pressure is below the triple point, the liquid state is not stable.

12.1 Friday Night Experiments: The Discovery of Graphene 505

12.2 Crystalline Solids: Determining Their Structures by X-Ray Crystallography 506

12.3 Crystalline Solids: Unit Cells and Basic Structures 508

12.4 Crystalline Solids: The Fundamental Types 516

12.5 The Structures of Ionic Solids 519


12.6 Network Covalent Atomic Solids: Carbon and Silicates 520

12.7 Ceramics, Cement, and Glass 523

12.8 Semiconductors and Band Theory 525

12.9 Polymers and Plastics 527

Key Learning Outcomes 530



Graphene is the thinnest material known—it is only one atom thick.

CHAPTER

12

Crystalline Solids and Modern Materials

In this chapter, we focus on the solid state of matter. We first examine the structures of solids, keeping in mind that these structures determine the properties of solids. For example, the repeating hexagonal pattern of water molecules in crystalline ice determines the hexagonal shape of a snowflake, and the repeating cubic pattern of sodium and chloride ions in sodium chloride determines the cubic shape of salt grains. In other words, the properties of solids (in this case their shape) are determined by the structure of the particles that compose them. We then turn our attention to the study and development of solids with unique and useful properties, a field known as *materials science*. The ceramics that compose your coffee cups, the semiconductors in your electronic devices, and the plastics that are all around you are materials developed to have specific properties that serve specific purposes. In this chapter, we take a brief look at each of these kinds of materials.

“One should realise that ideas are never new. However brilliant, every idea is always based on previous knowledge.... This should not be used as excuse for not trying because local circumstances vary.... New technologies offer a reasonable chance that old failed ideas may work unpredictably well the next time round.”

—Andre Geim (1958–)

12.1 Friday Night Experiments: The Discovery of Graphene

In 2010, Andre Geim (1958–) and Konstantin Novoselov (1974–) were awarded the Nobel Prize in Physics for the discovery of a new material—graphene. **Graphene** is the thinnest material ever known (only one atom thick); it is also the strongest. It conducts heat and electricity, is transparent, and is completely impermeable to all substances including helium. Although its many possible applications are yet to be realized, graphene may one day be used to make faster computers, foldable touch screens, ultrathin light panels, and super-strong plastics to construct satellites, airplanes, ships, and cars. How did these scientists discover this wonder material? Through *Friday night experiments*.

Most successful modern scientists work in a narrow field of study, chipping away at a problem that they are experts at and know intimately. Andre Geim also worked this way—but not all of the time.

Geim often ventured into what he calls *lateral ideas*. Lateral ideas are explorations into fields far from Geim's immediate area of expertise. Over 15 years he explored about two dozen such ideas. These explorations became known as *Friday night experiments* (even though they took much longer than just one night). Most Friday night experiments were complete failures, but some succeeded. For example, in one Friday night experiment, Geim was able to suspend an entire frog in a magnetic field. In another, he developed a new kind of tape designed to mimic the toes of a gecko. And Geim's most successful Friday night experiment led to the discovery of graphene.

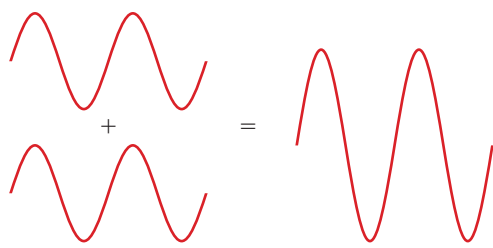
In 2002, Geim assigned a brand-new graduate student a Friday night experiment as a way to give him time to get acquainted with the laboratory. The student's assignment was to make films of graphite "as thin as possible." The graduate student tackled the task by attempting to polish a tablet of graphite down to almost nothingness. In spite of his best efforts, the thinnest sheet he could craft with this method was still pretty thick (about 10 μm). In a breakthrough moment, a colleague brought Geim a piece of scotch tape that had been adhered to a graphite surface and then removed. The tape had remnants of graphite stuck to it. When Geim examined the graphite flakes under a microscope, he realized that these flakes were much thinner than those his graduate student was able to produce through polishing. In fact, some of the flakes were just one layer thick!

Over the next several months, Geim and his colleagues were able to isolate these flakes and measure some of their properties. In 2004, Geim and his colleagues published their results—the discovery of atomically thin carbon—in *Nature*. In 2010, Geim and his closest collaborator on the project, Konstantin Novoselov, were awarded the Nobel Prize in physics for "groundbreaking experiments regarding the two-dimensional material graphene."

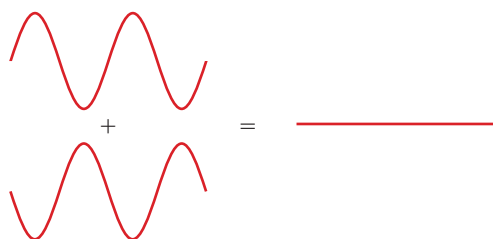
Graphene has been right under our noses for some time. Every time you write with a pencil, layers of graphite flake onto the paper, leaving the familiar gray trail. That trail undoubtedly contains flakes of graphene—too small to see. Geim and Novoselov were able to see what others had missed and, as a result, discovered a new wonder material. These kinds of discoveries often have huge impacts on society—although it may take decades to realize and refine their applications.

In this chapter, we look into the world of solids and materials and see how they permanently changed societies, just like graphene may someday change our present society. For example, the discovery of cement led to a revolution in building, the discovery of porcelain led to a revolution in dishware, and the discovery of semiconducting materials made possible the computer and Internet revolution, which is still unfolding today. The development of new materials continues to be an active and growing area of research. We begin by examining a technique to determine the structure of solids.

12.2 Crystalline Solids: Determining Their Structures by X-Ray Crystallography



Constructive interference



Destructive interference

Recall that crystalline solids are composed of atoms or molecules arranged in structures with long-range order (see Section 11.2). If you have ever visited the mineral section of a natural history museum and seen crystals with smooth faces and well-defined angles between them, or if you have carefully observed the hexagonal shapes of snowflakes, you have witnessed some of the effects of the underlying order in crystalline solids. The often beautiful geometric shapes that we see on the macroscopic scale are the result of specific structural patterns on the molecular and atomic scales. But how do we study these patterns? How do we look into the atomic and molecular world to determine the arrangement of the atoms and measure the distances between them? In this section, we examine **X-ray diffraction**, a powerful laboratory technique that enables us to do exactly that.

In Section 2.2 we saw that electromagnetic (or light) waves interact with each other in a characteristic way called *interference*: waves can cancel each other out or reinforce each other, depending on the alignment of their crests and troughs. *Constructive interference* occurs when two waves interact with their crests and troughs in alignment. *Destructive interference* occurs when two waves interact with the crests of one aligning with the troughs of the other. Recall also that when light encounters two slits separated by a distance comparable to the wavelength of the light, constructive and destructive interference between the resulting beams produces a characteristic *interference pattern*, consisting of alternating bright and dark lines.

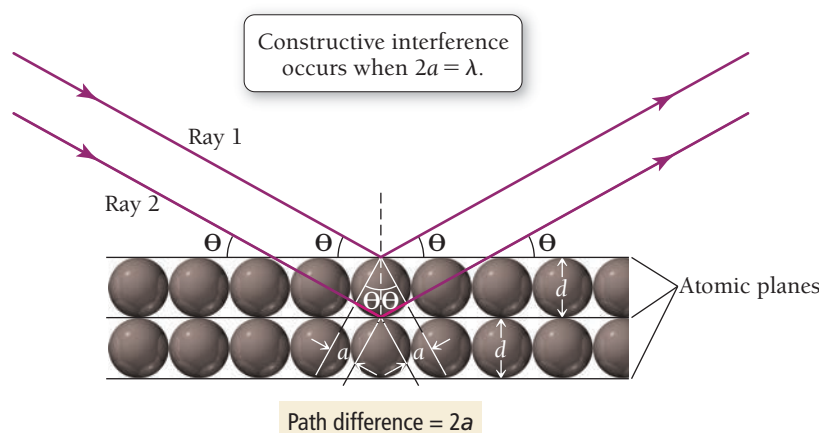


FIGURE 12.1 Diffraction from a Crystal When X-rays strike parallel planes of atoms in a crystal, constructive interference occurs if the difference in path length between beams reflected from adjacent planes is an integral number of wavelengths.

Atoms within crystal structures have spaces between them on the order of 10^2 pm, so light of similar wavelength (which happens to fall in the X-ray region of the electromagnetic spectrum) forms interference patterns or *diffraction patterns* when it interacts with those atoms in the crystals. The exact pattern of diffraction reveals the spacing between planes of atoms. Consider two planes of atoms within a crystalline lattice separated by a distance d , as shown in **Figure 12.1** ▲. If two rays of light with wavelength λ that are initially in phase (that is, the crests of one wave are aligned with the crests of the other) diffract from the two planes, the diffracted rays may interfere with each other constructively or destructively, depending on the difference between the path lengths traveled by each ray. If the difference between the two path lengths ($2a$) is an integral number (n) of wavelengths, then the interference will be constructive:

$$n\lambda = 2a \quad (\text{criterion for constructive interference}) \quad [12.1]$$

Using trigonometry, we can see that the angle of reflection (θ) is related to the distance a and the separation between layers (d) by the following relation:

$$\sin \theta = \frac{a}{d} \quad [12.2]$$

Rearranging, we get:

$$a = d \sin \theta \quad [12.3]$$


By substituting Equation 12.1 into Equation 12.3, we arrive at the following important relationship:

$$n\lambda = 2d \sin \theta \quad \text{Bragg's law}$$

This equation is known as *Bragg's law*. For a given wavelength of light incident on atoms arranged in layers, we can measure the angle that produces constructive interference (which appears as a bright spot on the X-ray diffraction pattern) and then calculate d , the distance between the atomic layers:

$$d = \frac{n\lambda}{2 \sin \theta} \quad [12.4]$$

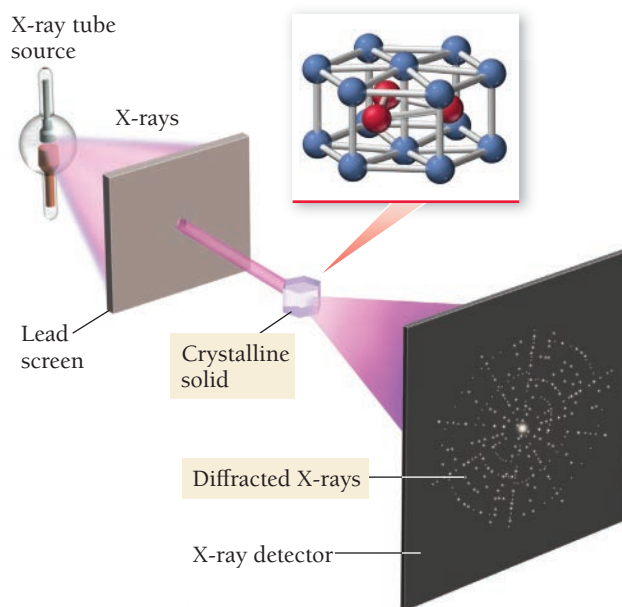
In a modern X-ray diffractometer (**Figure 12.2** ► on the next page), the diffraction pattern from a crystal is collected and analyzed by a computer. By rotating the crystal and collecting the resulting diffraction patterns at different angles, the distances between various crystalline planes can be measured, eventually yielding the entire crystalline structure. This process is *X-ray crystallography*. Researchers use X-ray crystallography to determine not only the structures of simple atomic lattices, but also the structures of proteins, DNA, and other biologically important molecules. For example, the famous X-ray diffraction photograph shown at right in the margin, obtained by Rosalind Franklin and Maurice Wilkins, helped Watson and Crick determine the double-helical structure of DNA. Researchers also used X-ray diffraction to determine the structure of HIV protease, a protein critical to the reproduction of HIV and the development of AIDS. That structure was used to design drug molecules that inhibit the action of HIV protease, thus halting the advance of the disease.



▲ X-Ray diffraction of DNA

► FIGURE 12.2 X-Ray Diffraction

Analysis In X-ray crystallography, an X-ray beam is passed through a crystalline solid sample, which is rotated to allow diffraction from different crystalline planes. The resulting patterns, representing constructive interference from various planes, are analyzed to determine crystalline structure.



EXAMPLE 12.1

Using Bragg's Law

When an X-ray beam of $\lambda = 154 \text{ pm}$ is incident on the surface of an iron crystal, it produces a maximum reflection at an angle of $\theta = 32.6^\circ$. Assuming $n = 1$, calculate the separation between layers of iron atoms in the crystal.

SOLUTION

To solve this problem, use Bragg's law in the form of Equation 12.4. The distance, d , is the separation between layers in the crystal.

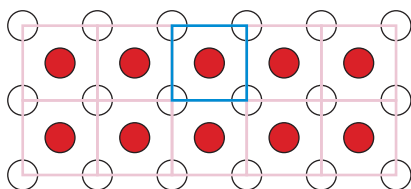
$$\begin{aligned} d &= \frac{n\lambda}{2 \sin \theta} \\ &= \frac{154 \text{ pm}}{2 \sin (32.6^\circ)} \\ &= 143 \text{ pm} \end{aligned}$$

FOR PRACTICE 12.1

The spacing between layers of molybdenum atoms is 157 pm. Calculate the angle at which 154 pm X-rays produce a maximum reflection for $n = 1$.



KEY CONCEPT VIDEO
Unit Cells: Simple Cubic,
Body-Centered Cubic,
and Face-Centered Cubic



12.3 Crystalline Solids: Unit Cells and Basic Structures

X-ray crystallography allows us to determine the regular arrangements of atoms within a crystalline solid. This arrangement is called the **crystalline lattice**. The crystalline lattice of any solid is nature's way of aggregating the particles to minimize their energy.

The Unit Cell

We represent the crystalline lattice with a small collection of atoms, ions, or molecules called the **unit cell**. When the unit cell is repeated over and over—like the tiles of a floor or the pattern in a wallpaper design, but in three dimensions—the entire lattice is reproduced. For example, consider the two-dimensional crystalline lattice shown at left. The unit cell for this lattice is the blue square. Each circle represents an atom, ion, or molecule. Repeating the unit cell pattern throughout the two-dimensional space generates the entire lattice.

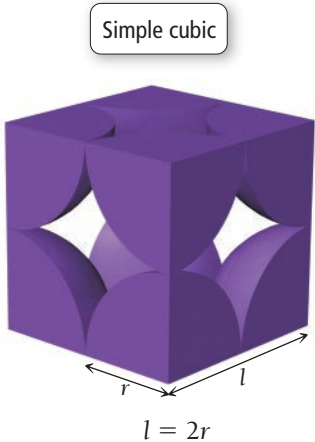
Many different unit cells exist, and we often classify unit cells by their symmetry. In this book, we focus primarily on *cubic unit cells* (although we also look at one hexagonal unit cell). Cubic unit cells are

characterized by equal edge lengths and 90° angles at their corners. **Figure 12.3 ▼** presents the three cubic unit cells—simple cubic, body-centered cubic, and face-centered cubic—and some of their basic characteristics. The two colors in this figure help illustrate the different positions of the atoms; the colors *do not* represent different kinds of atoms. For these unit cells, *each atom in any one structure is identical to the other atoms in that structure.*

Cubic Cell Name	Atoms per Unit Cell	Structure	Coordination Number	Edge Length in Terms of r	Packing Efficiency (fraction of volume occupied)
Simple Cubic	1		6	$2r$	52%
Body-Centered Cubic	2		8	$\frac{4r}{\sqrt{3}}$	68%
Face-Centered Cubic	4		12	$2\sqrt{2}r$	74%

FIGURE 12.3 The Cubic Crystalline Lattices The different colors used for the atoms in this figure are for clarity only. All atoms within each structure are identical.

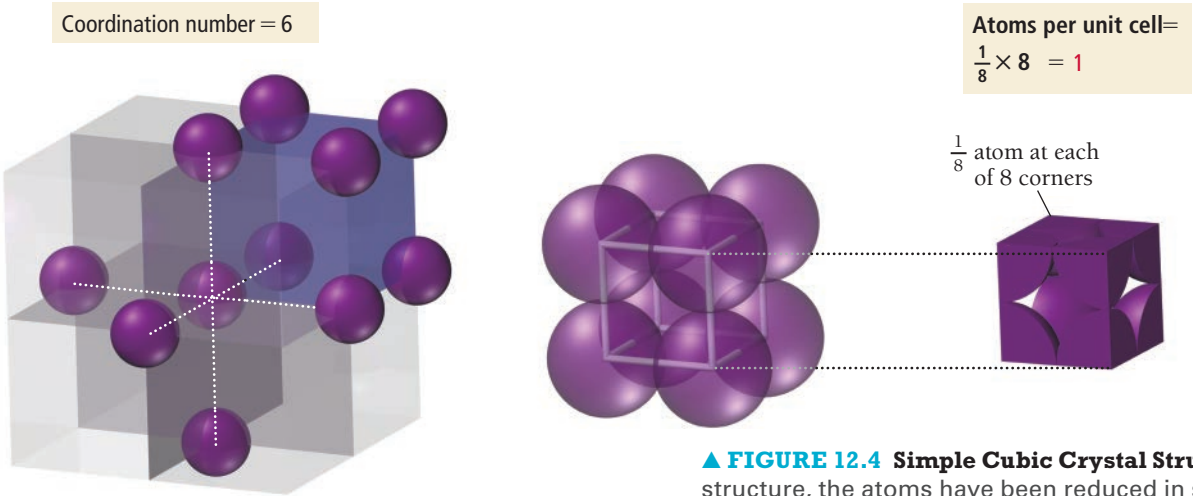
Unit cells, such as the cubic ones shown here, are customarily portrayed with “whole” atoms, even though only a part of the whole atom may actually be in the unit cell.



▲ In the simple cubic lattice, the atoms touch along each edge so that the edge length is $2r$.

The **simple cubic** unit cell (**Figure 12.4 ▼**) consists of a cube with one atom at each corner. The atoms touch along each edge of the cube, so the edge length is twice the radius of the atoms ($l = 2r$). Even though it may seem like the unit cell contains eight atoms, it actually contains only one. Each corner atom is shared by eight other unit cells. In other words, any one unit cell actually contains only one-eighth of each of the eight atoms at its corners, for a total of just one atom per unit cell.

Simple Cubic Unit Cell



▲ **FIGURE 12.4 Simple Cubic Crystal Structure** In the leftmost structure, the atoms have been reduced in size for clarity.

A characteristic feature of any unit cell is the **coordination number**, the number of atoms with which each atom is in *direct contact*. The coordination number is the number of atoms with which a particular atom can strongly interact. The simple cubic unit cell has a coordination number of 6; any one atom touches six others, as Figure 12.4 illustrates. A quantity closely related to the coordination number is the **packing efficiency**, the percentage of the volume of the unit cell occupied by the spheres. The higher the coordination number, the greater the packing efficiency. The simple cubic unit cell has a packing efficiency of 52%—the simple cubic unit cell contains a lot of empty space.

EXAMPLE 12.2

Calculating the Packing Efficiency of a Unit Cell


Calculate the packing efficiency of the simple cubic unit cell.

SOLUTION

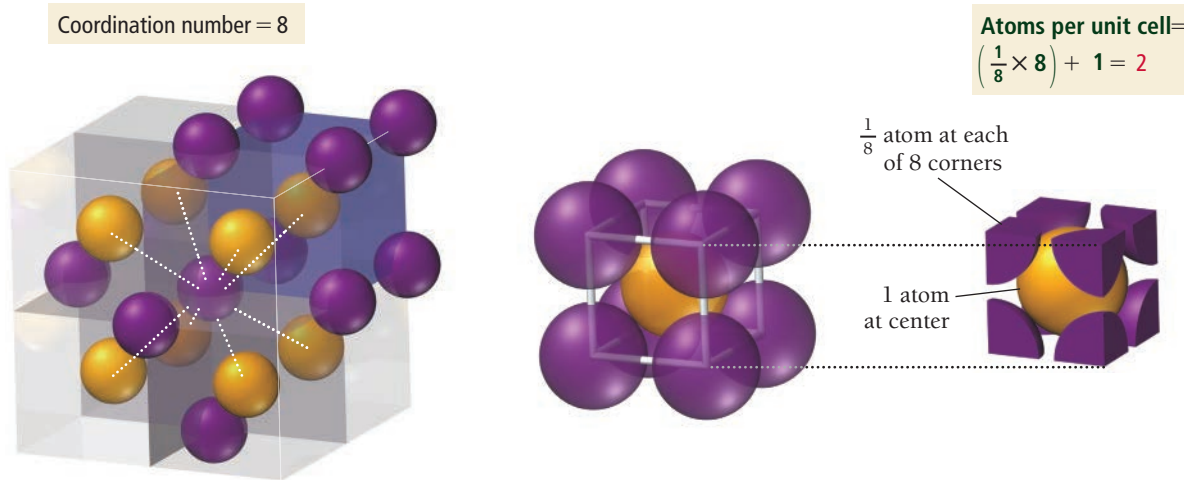
The packing efficiency is defined as the ratio of the volume of the unit cell occupied by atoms to the volume of the unit cell itself, all multiplied by 100%.	$\text{packing efficiency} = \frac{V_{\text{atom}}}{V_{\text{unit cell}}} \times 100\%$
First determine the volume occupied by atoms. Because each unit cell contains one atom, the volume of the unit cell occupied by atoms is simply the volume of one atom.	$V_{\text{atom}} = \frac{4}{3}\pi r^3$
Next, calculate the volume of the cube in terms of the radius of the atom. The volume of a cube is its edge length cubed, and the edge length of the simple cubic unit cell is $2r$.	$\begin{aligned} V_{\text{unit cell}} &= l^3 \\ &= (2r)^3 \\ &= 8r^3 \end{aligned}$
Calculate the packing efficiency by dividing the volume of the atom by the volume of the unit cell and multiplying by 100%.	$\begin{aligned} \text{packing efficiency} &= \frac{V_{\text{atom}}}{V_{\text{unit cell}}} \times 100\% \\ &= \frac{\frac{4}{3}\pi r^3}{8r^3} \times 100\% \\ &= \frac{\frac{4}{3}\pi r^{\cancel{3}}}{8\cancel{r^3}} \times 100\% \\ &= \frac{4}{24}\pi \times 100\% \\ &= 52.36\% \end{aligned}$

FOR PRACTICE 12.2

Calculate the packing efficiency of the two-dimensional lattice shown here.

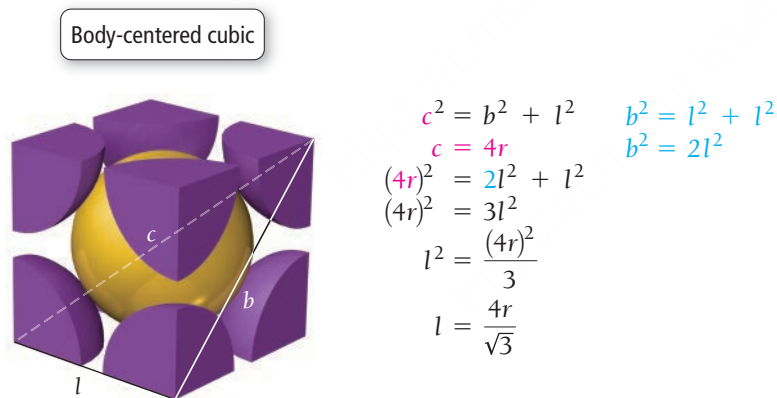


Body-Centered Cubic Unit Cell



▲ **FIGURE 12.5 Body-Centered Cubic Crystal Structure** The different colors used for the atoms in this figure are for clarity only. All atoms within the structure are identical. In the leftmost structure, the atoms have been reduced in size for clarity.

The **body-centered cubic** unit cell (**Figure 12.5** ▲) consists of a cube with one atom at each corner and one atom (of the same kind) in the very center of the cube. Note that in the body-centered unit cell, the atoms *do not* touch along each edge of the cube, but instead along the diagonal line that runs from one corner, through the middle of the cube, to the opposite corner. The edge length in terms of the atomic radius is therefore $l = 4r/\sqrt{3}$ as shown in this diagram:



▲ In the body-centered cubic lattice, the atoms touch only along the cube diagonal (line labeled c). The edge length is $4r/\sqrt{3}$.

The body-centered cubic unit cell contains two atoms per unit cell because the center atom is not shared with any other neighboring cells. The coordination number of the body-centered cubic unit cell is 8, which we can see by examining the atom in the very center of the cube, which touches eight atoms at the corners. The packing efficiency is 68%, significantly higher than for the simple cubic unit cell. Each atom in this structure strongly interacts with more atoms than each atom in the simple cubic unit cell.

EXAMPLE 12.3

Relating Unit Cell Volume, Edge Length, and Atomic Radius

A body-centered cubic unit cell has a volume of $4.32 \times 10^{-23} \text{ cm}^3$. Find the radius of the atom in pm.

SORT You are given the volume of a unit cell and asked to find the radius of the atom.

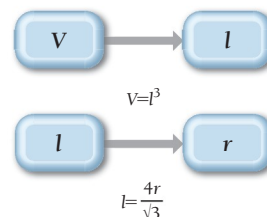
STRATEGIZE Use the volume to find the edge length of the unit cell.

Then use the edge length to find the radius of the atom.

GIVEN: $V = 4.32 \times 10^{-23} \text{ cm}^3$

FIND: r (in pm)

CONCEPTUAL PLAN



RELATIONSHIPS USED

$V = l^3$ (volume of a cube)

$l = \frac{4r}{\sqrt{3}}$ (edge length of body-centered cubic unit cell)

SOLVE

Solve the equation for the volume of a cube for l and substitute in the given value for V to find l .

Solve the equation for the edge length of a body-centered cubic unit cell for r and substitute in the value of l (from the previous step) to find r .

Convert r from cm to m and then to pm.

SOLUTION

$$V = l^3$$

$$l = \sqrt[3]{V} = \sqrt[3]{4.32 \times 10^{-23} \text{ cm}^3} = 3.5088 \times 10^{-8} \text{ cm}$$

$$l = \frac{4r}{\sqrt{3}}$$

$$r = \frac{\sqrt{3}l}{4} = \frac{\sqrt{3}(3.5088 \times 10^{-8} \text{ cm})}{4} = 1.5193 \times 10^{-8} \text{ cm}$$

$$1.5193 \times 10^{-8} \text{ cm} \times \frac{0.01 \text{ m}}{1 \text{ cm}} \times \frac{1 \text{ pm}}{10^{-12} \text{ m}} = 152 \text{ pm}$$

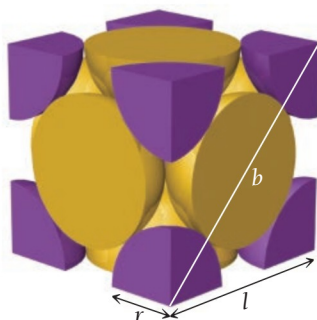
CHECK

The units of the answer (pm) are correct. The magnitude is also reasonable since atomic radii range roughly from 50 to 200 pm.

FOR PRACTICE 12.3

An atom has a radius of 138 pm and crystallizes in the body-centered cubic unit cell. What is the volume of the unit cell in cm^3 ?

Face-centered cubic



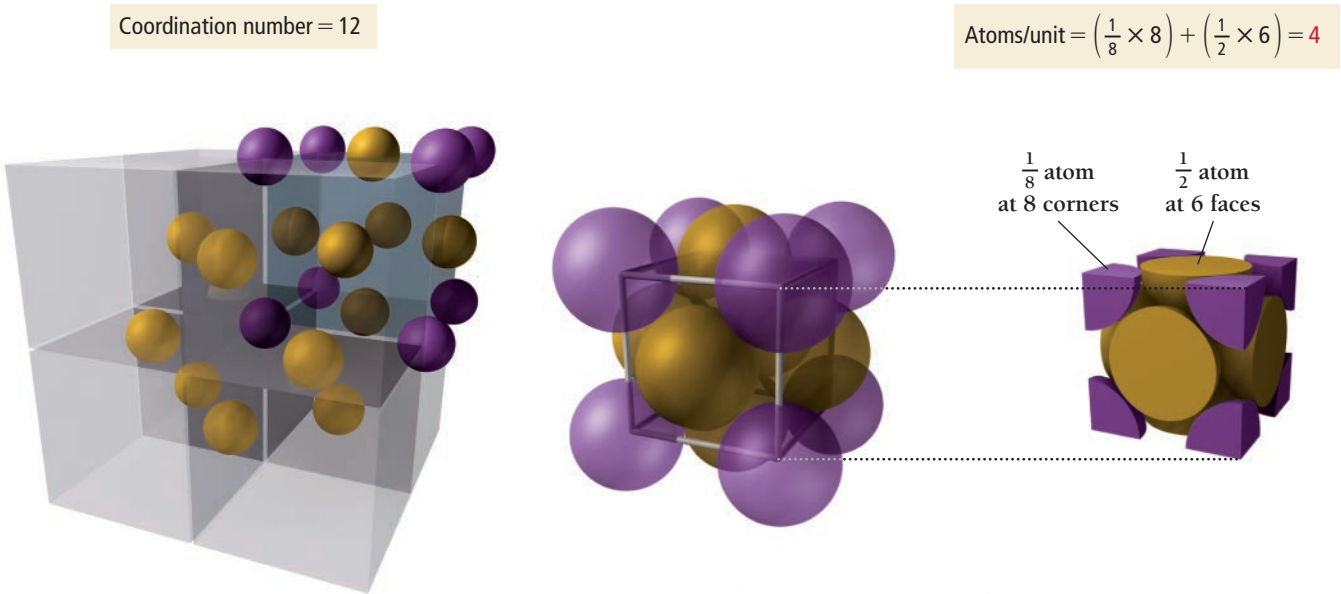
$$\begin{aligned}
 b^2 &= l^2 + l^2 = 2l^2 \\
 b &= 4r \\
 (4r)^2 &= 2l^2 \\
 l^2 &= \frac{(4r)^2}{2} \\
 l &= \frac{4r}{\sqrt{2}} \\
 &= 2\sqrt{2}r
 \end{aligned}$$

The **face-centered cubic** unit cell (**Figure 12.6**) is a cube with one atom at each corner and one atom (of the same kind) in the center of each cube face. Note that in the face-centered unit cell (like the body-centered unit cell), the atoms *do not* touch along each edge of the cube. Instead, the atoms touch *along the diagonal face*. The edge length in terms of the atomic radius is therefore $l = 2\sqrt{2}r$, as shown in the left margin.

The face-centered unit cell contains four atoms per unit cell because the center atoms on each of the six faces are shared between two unit cells. There are $\frac{1}{2} \times 6 = 3$ face-centered atoms plus a $\frac{1}{8} \times 8 = 1$ corner atom, for a total of four atoms per unit cell. The coordination number of the face-centered cubic unit cell is 12, and its

◀ In the face-centered cubic lattice, the atoms touch along a face diagonal (line labeled b). The edge length is $2\sqrt{2}r$.

Face-Centered Cubic Unit Cell



▲ FIGURE 12.6 Face-Centered Cubic Crystal Structure The different colors used on the atoms in this figure are for clarity only. All atoms within the structure are identical. In the leftmost structure, the atoms have been reduced in size for clarity.

packing efficiency is 74%. In this structure, any one atom strongly interacts with more atoms than in either the simple cubic unit cell or the body-centered cubic unit cell.

EXAMPLE 12.4

Relating Density to Crystal Structure

Interactive
Worked Example
Video 12.4

PEARSON
eText
2.0

Aluminum crystallizes with a face-centered cubic unit cell. The radius of an aluminum atom is 143 pm. Calculate the density of solid crystalline aluminum in g/cm ³ .	
SORT You are given the radius of an aluminum atom and its crystal structure. You are asked to find the density of solid aluminum.	GIVEN: $r = 143$ pm, face-centered cubic FIND: d
STRATEGIZE The conceptual plan is based on the definition of density. Because the unit cell has the physical properties of the entire crystal, you can find the mass and volume of the unit cell and use these to calculate its density.	CONCEPTUAL PLAN $d = m/V$ m = mass of unit cell = number of atoms in unit cell \times mass of each atom V = volume of unit cell = (edge length) ³
SOLVE Begin by finding the mass of the unit cell. Determine the mass of an aluminum atom from its molar mass. Because the face-centered cubic unit cell contains four atoms per unit cell, you multiply the mass of aluminum by 4 to find the mass of a unit cell.	SOLUTION $m(\text{Al atom}) = 26.98 \frac{\text{g}}{\text{mol}} \times \frac{1 \text{ mol}}{6.022 \times 10^{23} \text{ atoms}}$ $= 4.480 \times 10^{-23} \frac{\text{g}}{\text{atom}}$ $m(\text{unit cell}) = 4 \text{ atoms} \left(4.480 \times 10^{-23} \frac{\text{g}}{\text{atom}} \right)$ $= 1.792 \times 10^{-22} \text{ g}$

—Continued on the next page

Continued from the previous page—

Next, calculate the edge length (l) of the unit cell (in m) from the atomic radius of aluminum. For the face-centered cubic structure, $l = 2\sqrt{2}r$.	$\begin{aligned}l &= 2\sqrt{2}r \\&= 2\sqrt{2}(143\text{ pm}) \\&= 2\sqrt{2}(143 \times 10^{-12}\text{ m}) \\&= 4.045 \times 10^{-10}\text{ m}\end{aligned}$
Calculate the volume of the unit cell (in cm^3) by converting the edge length to cm and cubing the edge length. (Use centimeters because you want to report the density in units of g/cm^3 .)	$\begin{aligned}V &= l^3 \\&= \left(4.045 \times 10^{-10}\text{ m} \times \frac{1\text{ cm}}{10^{-2}\text{ m}}\right)^3 \\&= 6.618 \times 10^{-23}\text{ cm}^3\end{aligned}$
Finally, calculate the density by dividing the mass of the unit cell by the volume of the unit cell.	$\begin{aligned}d &= \frac{m}{V} = \frac{1.792 \times 10^{-22}\text{ g}}{6.618 \times 10^{-23}\text{ cm}^3} \\&= 2.71\text{ g}/\text{cm}^3\end{aligned}$
CHECK The units of the answer are correct. The magnitude of the answer is reasonable because the density is greater than $1\text{ g}/\text{cm}^3$ (as you would expect for metals), but still not too high (because aluminum is a low-density metal).	
FOR PRACTICE 12.4 Chromium crystallizes with a body-centered cubic unit cell. The radius of a chromium atom is 125 pm. Calculate the density of solid crystalline chromium in g/cm^3 .	

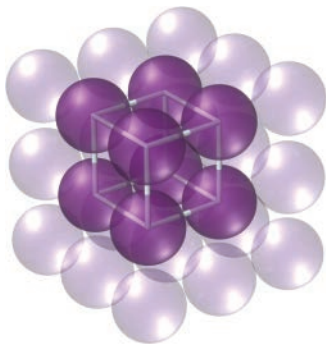


12.1
Cc

Conceptual
Connection

Cubic Structures

How many atoms are in the face-centered cubic unit cell?




Simple Cubic

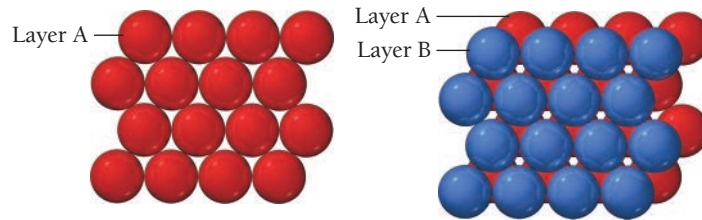
Closest-Packed Structures

Another way to envision crystal structures, which is especially useful in metals where bonds are not usually directional, is to think of the atoms as stacking in layers, much as fruit is stacked at the grocery store. For example, we can envision the simple cubic structure as one layer of atoms arranged in a square pattern with the next layer stacking directly over the first, so that the atoms in one layer align exactly on top of the atoms in the layer beneath it, as shown in the left margin. As we saw previously, this simple cubic unit crystal structure has a great deal of empty space—only 52% of the volume is occupied by the spheres, and the coordination number is 6.

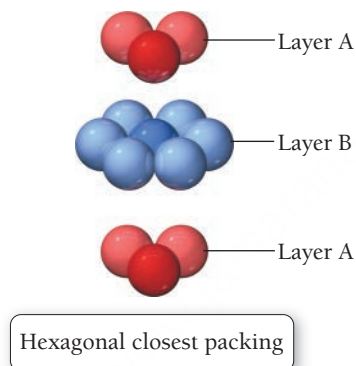
More space-efficient packing can be achieved by aligning neighboring rows of atoms in a pattern with one row offset from the next by one-half a sphere, as shown here:



In this way, the atoms pack more closely to each other in any one layer. We can further increase the packing efficiency by placing the next layer *not directly on top of the first*, but again offset so that any one atom actually sits in the indentation formed by three atoms in the layer beneath it, as shown here:

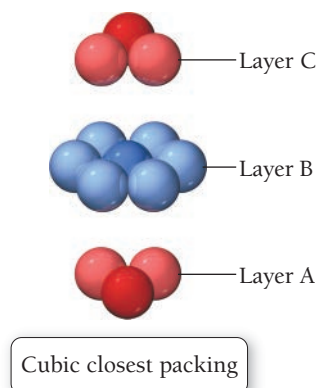


This kind of packing leads to two different crystal structures called *closest-packed structures*, both of which have a packing efficiency of 74% and a coordination number of 12. In the first of these two closest-packed structures—called **hexagonal closest packing**—the third layer of atoms aligns exactly on top of the first, as shown here:



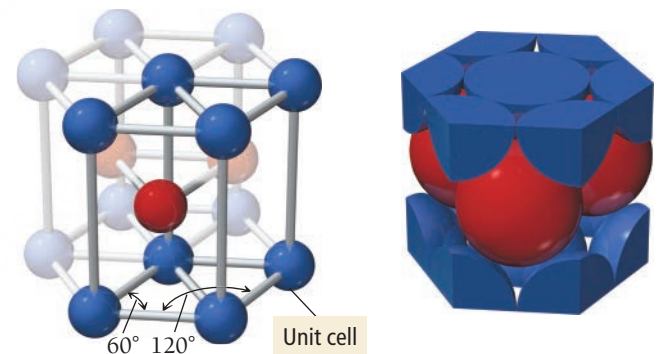
The pattern from one layer to the next is ABAB, with the third layer aligning exactly above the first. Notice that the central atom in layer B of this structure is touching six atoms in its own layer, three atoms in the layer above it, and three atoms in the layer below, for a coordination number of 12. The unit cell for this crystal structure is not a cubic unit cell but a hexagonal one, as shown in **Figure 12.7** ▶.

In the second of the two closest-packed structures—called **cubic closest packing**—the third layer of atoms is offset from the first, as shown here:



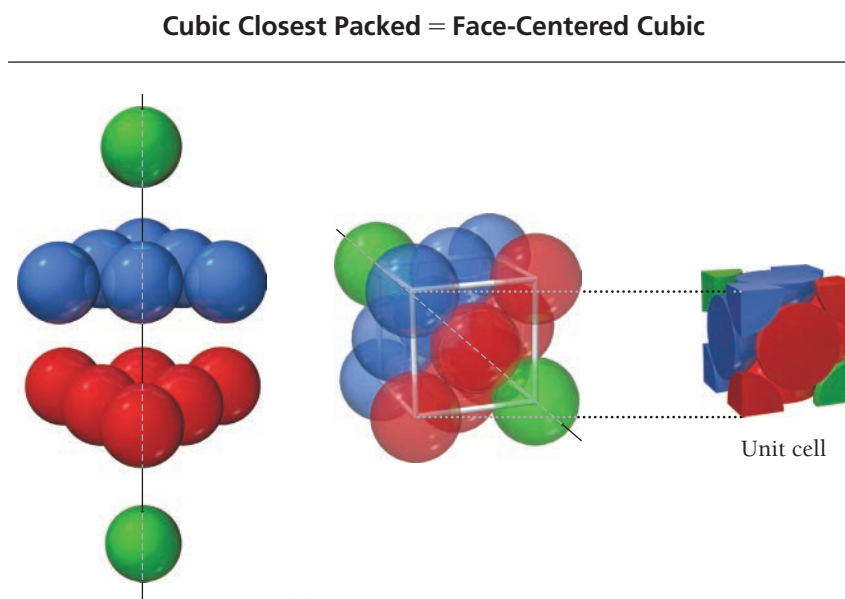
The pattern from one layer to the next is ABCABC, with every fourth layer aligning with the first. Although not simple to visualize, the unit cell for cubic closest packing is the face-centered cubic unit cell, as shown in **Figure 12.8** ▶ on the next page. The cubic closest-packed structure is identical to the face-centered cubic unit cell structure.

Hexagonal Closest Packing



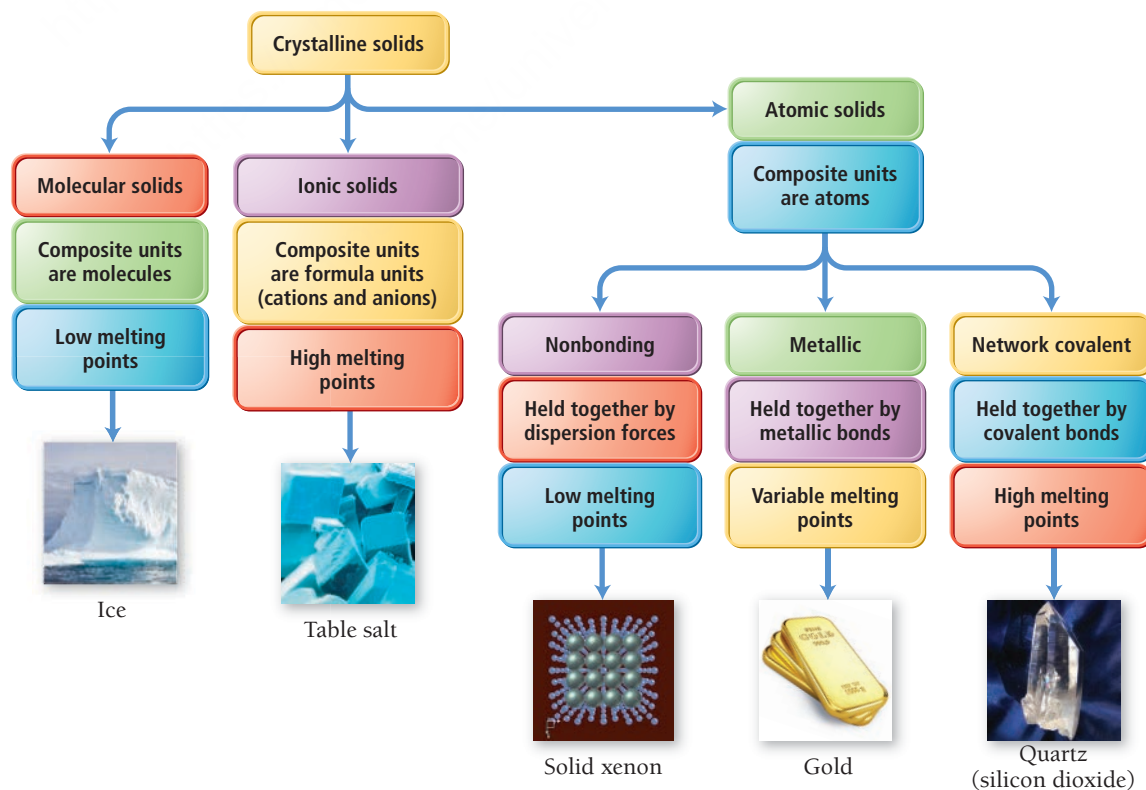
▲ **FIGURE 12.7 Hexagonal Closest Packing Crystal Structure** The unit cell is outlined in bold.

► **FIGURE 12.8 Cubic Closest-Packing Crystal Structure** The unit cell of the cubic closest-packed structure is face-centered cubic.



12.4 Crystalline Solids: The Fundamental Types

As we discussed in Section 11.2, solids may be crystalline (comprising a well-ordered array of atoms or molecules) or amorphous (having no long-range order). We classify crystalline solids into three categories—molecular, ionic, and atomic—based on the individual units that compose the solid. Atomic solids can themselves be classified into three categories—nonbonding, metallic, and network covalent—depending on the types of interactions between atoms within the solid. **Figure 12.9** ▼ shows the different categories of crystalline solids.

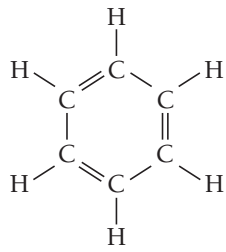
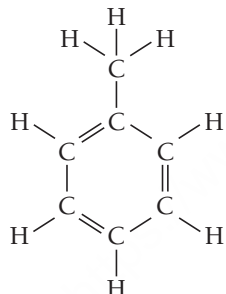


▲ **FIGURE 12.9 Types of Crystalline Solids**

Molecular Solids

Molecular solids are solids whose composite units are *molecules*. The lattice sites in a crystalline molecular solid are therefore occupied by molecules. Ice (solid H_2O) and dry ice (solid CO_2) are examples of molecular solids. Molecular solids are held together by the kinds of intermolecular forces—dispersion forces, dipole–dipole forces, and hydrogen bonding—discussed in Chapter 11.

Molecular solids as a whole tend to have low to moderately low melting points; however, their specific properties depend on the types of intermolecular forces present between the molecules as well as the structure of the molecule and the crystal structure of the solid. For example, benzene and toluene have similar molar masses and intermolecular forces (dispersion forces).

Compound	Structure	Molar Mass	Type of Intermolecular Force	Melting Point of Solid
Benzene (C_6H_6)		78.11 g/mol	Dispersion	5.5°C
Toluene		92.14 g/mol	Dispersion	−95.5°C


However, the extra $-\text{CH}_3$ group on toluene prevents the molecules from packing as efficiently in the toluene crystal as they do in benzene. As a result, even though toluene has a higher molar mass than benzene, it has a much lower melting point.

Some molecular solids crystallize in more than one structure. The different structures are called **polymorphs**. The different structures can have different properties, including different melting points and solubilities. Polymorphism is important in pharmaceuticals because different forms of a drug can have different physiological activities. For example, ritonavir was among the first drugs found to be effective in treating HIV and AIDS. When ritonavir was first discovered and approved for use, only one crystal structure was known. However, soon after its widespread use, a polymorph was discovered. This polymorph was more stable, less water-soluble, and much less physiologically active. Even worse, small amounts of this polymorph in a sample could convert the active form into the inactive one. The drug manufacturer had to halt production of ritonavir until researchers solved the problem by switching from a capsule form to a refrigerated gelcap form and later to a stable tablet form.

Polymorphism can exist in any crystalline material, not just molecular solids.

Ionic Solids

The composite units of **ionic solids** are ions. Table salt (NaCl) and calcium fluoride (CaF_2) are examples of ionic solids. The forces holding ionic solids together are strong coulombic forces (or ionic bonds), and because these forces are much stronger than intermolecular forces, ionic solids tend to have much higher melting points than molecular solids. For example, sodium chloride melts at 801 °C, while carbon disulfide (CS_2)—a molecular solid with a higher molar mass—melts at −110 °C. We examine the structure of ionic solids in Section 12.5.



▲ **FIGURE 12.10 The Electron Sea Model** In the electron sea model for metals, the metal cations exist in a “sea” of electrons.



▲ Copper can easily be drawn into fine strands like those used in household electrical cords.

Atomic Solids

In **atomic solids** the composite units are individual atoms. Solid xenon (Xe), iron (Fe), and silicon dioxide (SiO_2) are examples of atomic solids. We classify atomic solids into three categories—*nonbonding atomic solids*, *metallic atomic solids*, and *network covalent atomic solids*—with each type held together by a different kind of force.

Nonbonding atomic solids are held together by relatively weak dispersion forces. In order to maximize these interactions, nonbonding atomic solids form closest-packed structures, maximizing their coordination numbers and minimizing the distance between composite units. Nonbonding atomic solids have very low melting points that increase uniformly with molar mass. The only nonbonding atomic solids are noble gases in their solid form. Argon, for example, has a melting point of -189°C , and xenon has a melting point of -112°C .


Metallic atomic solids, such as iron or gold, are held together by *metallic bonds*, which in the simplest model are represented by the interaction of metal cations with the sea of electrons that surrounds them. As we have already discussed, metals have a tendency to lose electrons, which means that they have relatively low ionization energies. When metal atoms bond together to form a solid, each metal atom donates one or more electrons to an *electron sea*. For example, we can think of sodium metal as an array of positively charged Na^+ ions immersed in a sea of negatively charged electrons (e^-), as shown in **Figure 12.10** ◀. Each sodium atom donates its one valence electron to the “sea” and becomes a sodium ion. The sodium cations are held together by their attraction to the sea of electrons.

Although the **electron sea model** we have just discussed is simple, it accounts for many of the properties of metals. For example, metals conduct electricity because—in contrast to ionic solids where electrons are localized on an ion—the electrons in a metal are free to move. The movement or flow of electrons in response to an electric potential (or voltage) is an electric current. Metals are also excellent conductors of heat, again because of the highly mobile electrons, which help to disperse thermal energy throughout the metal.

The electron sea model also accounts for the *malleability* of metals (their capacity to be pounded into sheets) and the *ductility* of metals (their capacity to be drawn into wires). Since there are no localized or specific “bonds” in a metal, we can deform it relatively easily by forcing the metal ions to slide past one another.

Because metallic bonds are not directional, many metals tend to form closest-packed crystal structures. For example, nickel crystallizes in the cubic closest-packed structure, and zinc crystallizes in the hexagonal closest-packed structure (**Figure 12.11** ▼). Metallic bonds have varying strengths. Some metals, such as mercury, have melting points below room temperature, whereas other metals, such as iron, have relatively high melting points (iron melts at 1538°C).

Covalent bonds hold together **network covalent atomic solids**, such as diamond, graphite, and silicon dioxide. The crystal structures of these solids are more restricted by the geometrical constraints of the covalent bonds (which tend to be more directional than intermolecular forces, ionic bonds, or metallic bonds), so they *do not* tend to form closest-packed structures. Network covalent atomic solids have very high melting points because the crystalline solid is held together by covalent bonds. We examine some examples of this class of solids in Section 12.6.



► **FIGURE 12.11 Closest-Packed Crystal Structures in Metals** Nickel crystallizes in the cubic closest-packed structure. Zinc crystallizes in the hexagonal closest-packed structure.

EXAMPLE 12.5**Classifying Crystalline Solids**

Classify each crystalline solid as molecular, ionic, or atomic.

- (a) Au(s) (b) CH₃CH₂OH(s) (c) CaF₂(s)

SOLUTION

- (a) Au is a metal and is therefore an atomic solid.
 (b) Ethanol (CH₃CH₂OH) is a molecular compound. Solid ethanol is therefore a molecular solid.
 (c) Calcium fluoride (CaF₂) is an ionic compound, so CaF₂(s) is an ionic solid.

FOR PRACTICE 12.5

Which type of atomic solid is Au(s)?

Crystalline Solid Types and Melting Points

Which solid would you expect to have the highest melting point?

- (a) MgO(s) (b) I₂(s) (c) Kr(s)

12.2**Cc**

Conceptual
Connection

**12.5 The Structures of Ionic Solids**

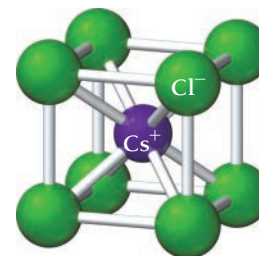
Many ionic solids have crystalline structures that are closely related to unit cells that we examined in Section 12.3. However, because ionic compounds necessarily contain both cations and anions, their structures must accommodate two different types of ions. In an ionic solid, the cations and anions attract one another. The coordination number of the unit cell represents the number of close cation–anion interactions. Because these interactions lower potential energy, the crystal structure of a particular ionic compound is the structure that maximizes the coordination number while accommodating both charge neutrality (each unit cell must be charge neutral) and the different sizes of the cations and anions that compose the particular compound. In general, the more similar the radii of the cation and the anion, the higher the coordination number.

Cesium chloride (CsCl) is a good example of an ionic compound with cations and anions of similar size (Cs⁺ radius = 167 pm; Cl[−] radius = 181 pm). In the cesium chloride structure, the chloride ions occupy the lattice sites of a simple cubic cell and one cesium ion lies in the very center of the cell, as shown in **Figure 12.12** ▶. (In this figure and in subsequent figures of ionic crystal structures, the different-colored spheres represent different ions.) The coordination number for cesium chloride is 8, meaning that each cesium ion is in direct contact with eight chloride ions (and vice versa). The cesium chloride unit cell contains one chloride anion ($8 \times \frac{1}{8} = 1$) and one cesium cation for a ratio of Cs to Cl of 1:1, as the formula for the compound indicates. (Note that complete chloride ions are shown in Figure 12.12, even though only $\frac{1}{8}$ of each ion is in the unit cell.) Calcium sulfide (CaS) has the same structure as cesium chloride.

The crystal structure of sodium chloride must accommodate the more disproportionate sizes of Na⁺ (radius = 97 pm) and Cl[−] (radius = 181 pm). If ion size were the only consideration, the larger chloride anion could theoretically fit many of the smaller sodium cations around it, but charge neutrality requires that each sodium cation be surrounded by an equal number of chloride anions. Therefore, the coordination number is limited by the number of chloride anions that can fit around the relatively small sodium cation.

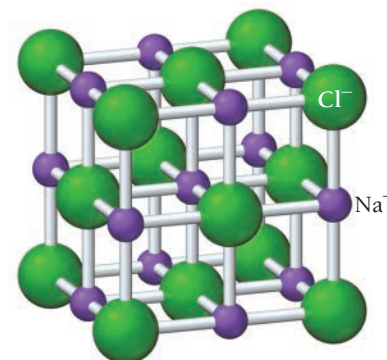
The sodium chloride structure that minimizes the energy is shown in **Figure 12.13** ▶ and has a coordination number of 6 (each chloride anion is surrounded by six sodium cations and vice versa). We can visualize this structure, called the *rock salt* structure, as chloride anions occupying the lattice sites of a face-centered cubic structure, with the smaller sodium cations occupying the holes between the anions. (Alternatively, we can visualize this structure as the *sodium cations* occupying the lattice sites of a

Cesium chloride (CsCl)



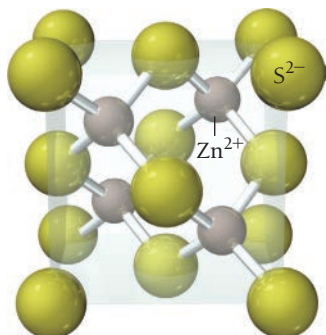
▲ FIGURE 12.12 Cesium Chloride Unit Cell The different-colored spheres in this figure represent the different ions in the compound.

Sodium chloride (NaCl)

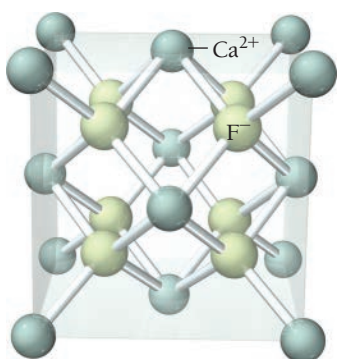


▲ FIGURE 12.13 Sodium Chloride Unit Cell The different-colored spheres in this figure represent the different ions in the compound.

Zinc blende (ZnS)



▲ **FIGURE 12.14 Zinc Sulfide (Zinc Blende) Unit Cell** The different-colored spheres in this figure represent the different ions in the compound.

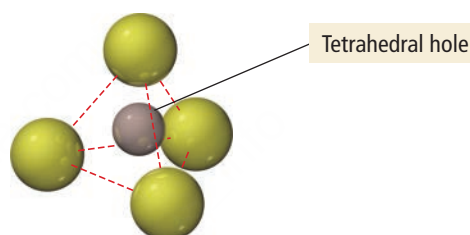
Calcium fluoride (CaF₂)

▲ **FIGURE 12.15 Calcium Fluoride Unit Cell** The different-colored spheres in this figure represent the different ions in the compound.

face-centered cubic structure with the *larger chloride anions* occupying the spaces between the cations.) Each unit cell contains four chloride anions $[(8 \times \frac{1}{8}) + (6 \times \frac{1}{2}) = 4]$ and four sodium cations $[(12 \times \frac{1}{4}) + 1 = 4]$, resulting in a ratio of 1:1, as the formula of the compound specifies. Other compounds exhibiting the sodium chloride structure include LiF, KCl, KBr, AgCl, MgO, and CaO.

When there is a greater disproportion between the sizes of the cations and anions in a compound, a coordination number of even 6 is physically impossible. For example, in ZnS (Zn^{2+} radius = 74 pm; S^{2-} radius = 184 pm) the crystal structure, shown in **Figure 12.14** ◀, has a coordination number of only 4. We can visualize this structure, called the *zinc blende* structure, as sulfide anions occupying the lattice sites of a face-centered cubic structure, with the smaller zinc cations occupying four of the eight tetrahedral holes located directly beneath each corner atom. A tetrahedral hole is the empty space that lies in the center of a tetrahedral arrangement of four atoms, as shown in the figure below.

A tetrahedral hole is the space in the center of a tetrahedral arrangement of four atoms.



Each unit cell contains four sulfide anions $[(8 \times \frac{1}{8}) + (6 \times \frac{1}{2}) = 4]$ and four zinc cations (each of the four zinc cations is completely contained within the unit cell), resulting in a ratio of 1:1, just as the formula of the compound indicates. Other compounds that exhibit the zinc blende structure include CuCl, AgI, and CdS.

When the ratio of cations to anions is not 1:1, the crystal structure must accommodate the unequal number of cations and anions. Many compounds that contain a cation-to-anion ratio of 1:2 adopt the *fluorite* (CaF_2) structure shown in **Figure 12.15** ◀. We can visualize this structure as calcium cations occupying the lattice sites of a face-centered cubic structure, with the larger fluoride anions occupying all eight of the tetrahedral holes located directly beneath each corner atom. Each unit cell contains four calcium cations $[(8 \times \frac{1}{8}) + (6 \times \frac{1}{2}) = 4]$ and eight fluoride anions (each of the eight fluoride anions is completely contained within the unit cell), resulting in a cation-to-anion ratio of 1:2, as the formula of the compound indicates. Other compounds exhibiting the fluorite structure include PbF_2 , SrF_2 , and BaCl_2 . Compounds with a cation-to-anion ratio of 2:1 often exhibit the *antifluorite* structure, in which the anions occupy the lattice sites of a face-centered cubic structure and the cations occupy the tetrahedral holes beneath each corner atom.



12.3 Cc

Conceptual
Connection

Ionic Crystalline Solid Unit Cells

Which compound is most likely to crystallize in the zinc blende structure?

- (a) RbCl (Rb^+ radius = 148 pm; Cl^- radius = 181 pm)
- (b) MgCl_2 (Mg^{2+} radius = 65 pm; Cl^- radius = 181 pm)
- (c) CuI (Cu^+ radius = 96 pm; I^- = 216 pm)

12.6 Network Covalent Atomic Solids: Carbon and Silicates

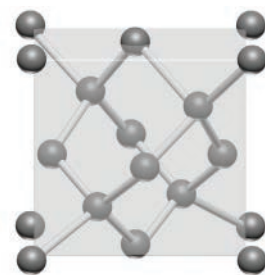
As we saw in Section 12.4, network covalent atomic solids are composed of atoms held together by covalent bonds. Network covalent atomic solids have some of the highest melting points of all substances. In this section, we examine two different families of network covalent atomic solids: carbon and silicates.

Carbon

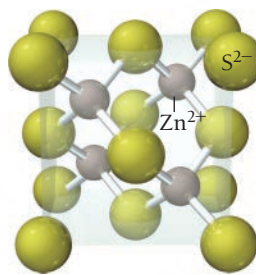
Elemental carbon exists in several different forms or **allotropes** including graphene, which we discussed in Section 12.1. Each form has a different structure and therefore different properties. Two well-known naturally occurring crystalline forms of carbon are **graphite** and **diamond**. Graphite's structure, shown in **Figure 12.16a** ▶, consists of flat sheets of carbon atoms covalently bonded together as interconnected hexagonal rings. The bond length between carbon atoms *within a sheet* is 142 pm. In contrast, the forces *between* sheets are much different than the bonds within sheets. There are no covalent bonds between sheets, only relatively weak dispersion force, and the separation between sheets is 341 pm. Consequently, the sheets slide past each other relatively easily, which explains the slippery feel of graphite and its extensive use as a lubricant. The electrons in the extended pi bonding network (see Section 6.3) within a sheet make graphite a good electrical conductor in the direction of the plane of the sheets. Because of its relative stability and electrical properties, graphite is used for electrodes in electrochemical applications and for heating elements in furnaces.

The density of graphite is 2.2 g/cm^3 . Under higher pressure, the carbon atoms in graphite rearrange to form diamond, which has a higher density of 3.5 g/cm^3 . Diamond forms naturally when carbon is exposed to high pressures deep underground. Through movements in Earth's crust, diamond rises toward the surface. Most diamond is found in Africa, mainly in the Congo region and in South Africa. The first synthetic diamonds were produced in the 1940s, using pressures of 50,000 atm and a temperature of 1600°C .

The unit cell for diamond is shown here:




▲ Diamond Unit Cell



▲ Zinc Blende (ZnS) Unit Cell

You can imagine the unit cell as a face-centered cubic structure with an additional carbon atom in half of the eight tetrahedral holes located directly in each corner atom. Notice the similarity between the diamond unit cell and the zinc blende unit cell that we discussed in Section 12.5. Notice also that each carbon atom is covalently bonded to four other carbon atoms at the corners of a tetrahedron (**Figure 12.16b** ▲). This structure extends throughout the entire crystal, so that a diamond crystal can be thought of as a giant molecule, held together by these covalent bonds.

Because covalent bonds are very strong, diamond has a very high melting point (it is estimated to melt at about 3550°C). The electrons in diamond are confined to the covalent bonds and are not free to flow. Therefore, diamond does not conduct electricity. However, because the bonds are strong and the connectivity between atoms so extensive, diamond is an excellent conductor of heat. Consequently, the largest use of diamonds is for abrasives and cutting tools. Small diamonds are used at the cutting edge of tools, making the tool edges much harder and giving them a longer life. Natural diamonds are valued as gems for their brilliance and relative inertness.



▲ **FIGURE 12.16 Network Covalent Atomic Solids** (a) In graphite, carbon atoms are arranged in sheets. Within each sheet, the atoms are covalently bonded to one another by a network of σ and π bonds. Neighboring sheets are held together by dispersion forces. (b) In diamond, each carbon atom forms four covalent bonds to four other carbon atoms in a tetrahedral geometry.

Phase Changes and Pressure

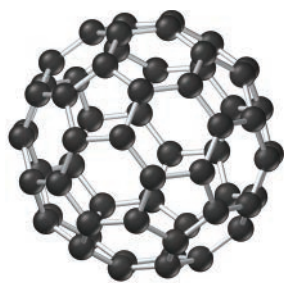
Why do high pressures favor the formation of diamond from graphite?

12.4

Cc

Conceptual
Connection



 C_{60} 


▲ **FIGURE 12.17** C_{60} and a Geodesic Dome The C_{60} structure resembles Buckminster Fuller's geodesic dome.

In the 1980s, researchers discovered a new form of carbon when they aimed a powerful laser at a graphite surface. This new form of carbon occurs as soccer-ball-shaped clusters of 60 carbon atoms (C_{60}). The atoms form five- and six-membered carbon rings wrapped into a 20-sided icosahedral structure (**Figure 12.17** ◀). The compound was named *buckminsterfullerene*, honoring R. Buckminster Fuller (1895–1953), a twentieth-century engineer and architect who advocated the construction of buildings using a structurally strong geodesic dome shape that he patented.

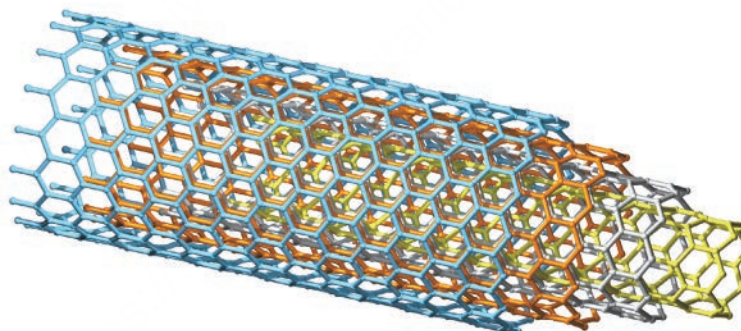
Researchers have since identified carbon clusters similar to C_{60} containing from 36 to over 100 carbon atoms. As a class, these carbon clusters are called **fullerenes** and nicknamed *buckyballs*. At room temperature, fullerenes are black solids—the individual clusters are held to one another by dispersion forces. Fullerenes are somewhat soluble in nonpolar solvents, and the different fullerenes form solutions of different colors.

Researchers have also synthesized long carbon structures called **nanotubes**, which consist of sheets of interconnected C_6 rings that assume the shape of a cylinder (like a roll of chicken wire). The first nanotubes discovered consisted of tubes with double walls of C_6 rings with closed ends. The ends of the tubes can be opened when they are heated under the proper conditions. Today, two general types of nanotubes can be produced: (1) *single-walled nanotubes* (SWNT) that have one layer of interconnected C_6 rings forming the walls, and (2) *multiwalled nanotubes* (MWNT) that have concentric layers of interconnected C_6 rings forming the walls. In addition, researchers have been able to form *nanoribbons* by slicing open nanotubes. As we saw in Section 12.1, carbon can also form graphene, long extended sheets of carbon atoms just one atom thick. These carbon structures are illustrated in **Figure 12.18** ▼.

(a) Single-walled nanotube (SWNT)




(b) Multiwalled nanotube (MWNT)



(c) Graphene nanoribbon



(d) Graphene sheet



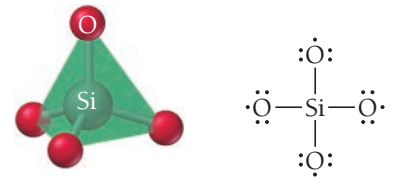
► **FIGURE 12.18** Novel Carbon Structures

Nanotubes are 100 times stronger than steel and only one-sixteenth as dense. Consequently, we use carbon nanotubes commercially for lightweight applications that require strength, such as golf clubs and bicycle frames. When the nanotubes are lined up parallel to one another, a bundle of the tubes forms a “wire” with very low electrical resistance. These tiny wires raise the possibility of making incredibly small electronic devices.

Silicates

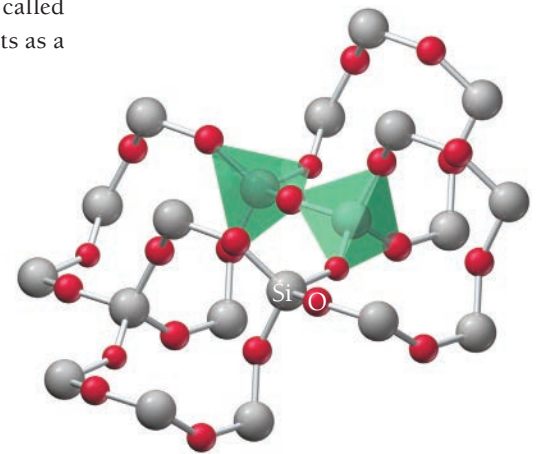
The **silicates** (extended arrays of silicon and oxygen) are the most common network covalent atomic solids. Geologists estimate that 90% of Earth's crust is composed of silicates. Silicon and oxygen form a network covalent structure in which a silicon atom bonds to four oxygen atoms, resulting in a tetrahedral shape with the silicon atom in the middle and the four oxygen atoms at the corners of the tetrahedron (**Figure 12.19** ▶). In this structure, the silicon atom bonds to each oxygen atom with a single covalent sigma bond. In contrast to carbon, which often bonds to oxygen with a double bond (one σ and one π bond), silicon forms only a single bond with oxygen because the silicon atom is too large to allow substantial overlap between the p orbitals on the two atoms. The silicon atom in this structure, by bonding to four oxygen atoms, obtains a complete octet. However, each oxygen atom is one electron short of an octet. Therefore, each O atom forms a second covalent bond to a different Si atom, forming the three-dimensional structure of **quartz**. Quartz has a formula unit of SiO_2 and is generally called **silica**. In silica, each Si atom is in a tetrahedron surrounded by four O atoms, and each O atom acts as a bridge connecting the corners of two tetrahedrons (**Figure 12.20** ▶).

Silicon occupies the center of the tetrahedron, and one oxygen atom occupies each corner.




▲ **FIGURE 12.19** SiO_4 Tetrahedron

Each O atom in each tetrahedron is a bridge connecting the corners of two tetrahedra.



▲ **FIGURE 12.20** Structure of Quartz



▲ The Venus of Dolni dates to 29,000–25,000 BCE and is the oldest ceramic object known. It was discovered in 1925 in the Czech Republic.

12.7 Ceramics, Cement, and Glass

The silicate structures we examined in Section 12.6 are common in ceramics, cement, and glass. These substances are used in buildings, electrical devices, pottery, and kitchenware. If you look around wherever you are sitting at this moment, you are likely to see examples of these materials. In this section of the chapter, we examine each of these amazing classes of materials individually.

Ceramics

Ceramics are traditionally defined as inorganic nonmetallic solids that are prepared from powders usually mixed with water, formed into the desired shape, and then heated. They are extensively used to make bricks, tiles, pottery, dishware, and insulating elements in electrical devices. Ceramics display a range of properties but are usually hard, strong, nonconductive, and brittle. The word *ceramics* originates from the Greek *keramikos*. *Keramikos* is an area of Athens that was the potters' quarter of the city, and the Greeks were among the first accomplished potters. However, pottery itself predates recorded history; the oldest known example is the Venus of Dolni, a figurine that dates to 29,000–25,000 BCE. Ceramics can be categorized into three types: silicate ceramics, oxide ceramics, and nonoxide ceramics.

Silicate Ceramics Many ceramics are composed of *aluminosilicates*, a class of minerals in which some of the silicon atoms in the silicate structure are replaced by aluminum. The weathering of naturally occurring aluminosilicates produces **clays**, which are essentially powdered forms of the minerals mixed with water. When heated, reactions occur that transform the clay into the ceramic substance.

For example, the clay kaolinite, $\text{Al}_2\text{Si}_2\text{O}_5(\text{OH})_4$, undergoes irreversible chemical and structural changes when heated (or fired) above 1500°C . These changes transform the clay into a white ceramic solid containing an extended network of Si-O and Al-O tetrahedra. Kaolinite is the most important component of porcelain, a ceramic substance that originated in China during the Han dynasty about



▲ Ceramic electrical insulator



▲ Aluminum oxide crucible



▲ The Roman Pantheon, still a popular tourist attraction, sits in the center of the heart of ancient Rome.



▲ Glassblowing involves blowing air into a hot piece of glass to form spherical shapes.

2000 years ago. The term *china* today still refers to the fine plates, saucers, and cups made from porcelain and related ceramic materials. Silicate ceramics also find extensive use as insulators in electrical applications.

Oxide Ceramics Among the most common oxide ceramics are Al_2O_3 and MgO . These materials demonstrate the advantages and disadvantages of the use of ceramic materials for industrial purposes compared to metals. Al_2O_3 melts at 2072°C , compared to aluminum metal, which melts at 660°C . MgO melts at an even higher temperature (2852°C). Both are physically and chemically stable at high temperatures. The high melting point and chemical stability make Al_2O_3 and MgO outstanding *refractory materials*—materials that can be used in high-temperature applications.

For example, aluminum oxide and magnesium oxide are used in industrial furnaces, high-speed cutting tools, crucibles, heating elements, and fire proofing. Engineers have long desired to take advantage of the high-temperature stability of ceramics to make ceramic engines. A ceramic engine can run at a higher temperature, which makes it more efficient and requires less cooling. However, certain less desirable characteristics of ceramics have made that pursuit difficult. Ceramic materials tend to be brittle and subject to thermal shock (they can crack upon fast changes in temperature). Whereas metals can bend and stretch under stress, ceramics break. Even though ceramics have found some limited use as components of engines, a completely ceramic mass-produced engine remains elusive.

Nonoxide Ceramics The nonoxide ceramics include substances such as Si_3N_4 , BN, and SiC. Silicon nitride is a network covalent solid with a structure similar to silica; the silicon atoms sit in the center of nitrogen tetrahedra that are linked together. Silicon nitride is used extensively in engine parts and non-metallic ball bearings. Boron nitride is isoelectronic with C_2 (i.e., BN and C_2 have the same number of valence electrons) and forms structures similar to carbon. For example, BN can form layered sheets (similar to graphite) that are covalently bound within the sheets but have only dispersion forces between the sheets. As a result, this form of BN makes a good high-temperature lubricant.

Cement

Cement was first discovered by the Romans, who used lime, volcanic ash, and clay to make a pourable slurry that hardened into a rock-like substance. The Romans used cement to construct the 43.3-m diameter dome of the Pantheon, a 2000-year-old edifice. This dome remains the largest unreinforced concrete dome in existence. The majority of the cement used today is Portland cement. The original Portland cement was patented in 1824 by an English bricklayer named Joseph Aspidin (1788–1855). The hardened cement resembles a prestigious building stone from the Isle of Portland in southwest England and derives its name from this resemblance.

Portland cement is a powdered mixture consisting mostly of limestone (CaCO_3) and silica (SiO_2), with smaller amounts of alumina (Al_2O_3), iron(III) oxide (Fe_2O_3), and gypsum ($\text{CaSO}_4 \cdot 2\text{H}_2\text{O}$). The powdered mixture reacts with water in a number of complex reactions that produce a final rock-like substance. Unlike clays, which lose water upon setting, Portland cement reacts *with* water as it hardens. The hardening process involves the formation of Si-O-Si bridges that produce fibrous structures. These structures bond strongly to each other (and most other substances).

Portland cement is combined with sand and pebbles to make **concrete**, the most widely used building material in the world. Concrete dramatically revolutionized construction. Before concrete, buildings were made exclusively by arranging the materials piece by piece. With the development of concrete, buildings could literally be poured into place. Concrete is used extensively to make foundations, walls, buildings, bridges, aqueducts, roads, and dams. About half of all the structures humans construct are made of concrete.

Glass

Silica melts when heated above 1500°C . After melting, if cooled quickly, silica does not crystallize back into the quartz structure. Instead, the Si atoms and O atoms form a randomly ordered amorphous structure called a **glass**. Silicate glass is transparent, impervious to water, and an outstanding material for making windows and drinking vessels. The Egyptians and Greeks likely made glass objects; however, the Romans in the first century AD were the first to extensively develop glassmaking. They discovered that adding sodium carbonate to silica dramatically lowers its melting point, allowing glass to form at

much lower temperatures. In addition, they developed glassblowing, which involves melting glass and then using a tube to blow the glass into spherical shapes.

When SiO_2 is made into a glass, the result is called **vitreous silica** or **fused silica**. This type of glass is hard, resists high temperatures, has a low thermal expansion, and is transparent to both visible light and ultraviolet light. Vitreous silica is too expensive for most common applications (because of the high temperatures required to produce it). The most common modern glass is **soda-lime glass**, which is also referred to as *window glass*. Soda-lime glass is about 70% SiO_2 with the balance being mostly Na_2O and CaO . This type of glass is transparent to visible light (not ultraviolet) and has a high thermal expansion, but it is less expensive to make and form into desired shapes than vitreous silica.

One disadvantage of soda-lime glass is its tendency to crack under thermal shock. Adding boric oxide (B_2O_3) to the glass mixture instead of CaO produces **borosilicate glass** (also known as **Pyrex®**), which expands less when heated. As a result, vessels made of Pyrex® can withstand heating and cooling cycles that would shatter soda-lime glass. The beakers, flasks, and other glassware found in most chemistry labs are made of borosilicate glass.

Leaded glass (often called *crystal* even though it is not a crystal) results when PbO is mixed with SiO_2 and a couple of other minor components. This type of glass has a higher index of refraction (it bends light more than ordinary glass), which results in more brilliant looking glassware. It also makes a ringing sound when tapped, which is a common test to distinguish lead crystal from ordinary glass. Recent concerns about the toxicity of lead in leaded glass have led to the development of lead-free alternatives (often called lead-free crystal) for stemware and drinking glasses, which has properties similar to those of leaded glass but without the negative health risks.



▲ Leaded glass has a higher index of refraction than ordinary glass, making it look more brilliant.

The amount of lead that leaches into a drink from leaded glass over a short period of time is likely inconsequential. However, storing drinks in leaded glass for long periods of time can lead to elevated lead levels in the liquid.

12.8 Semiconductors and Band Theory

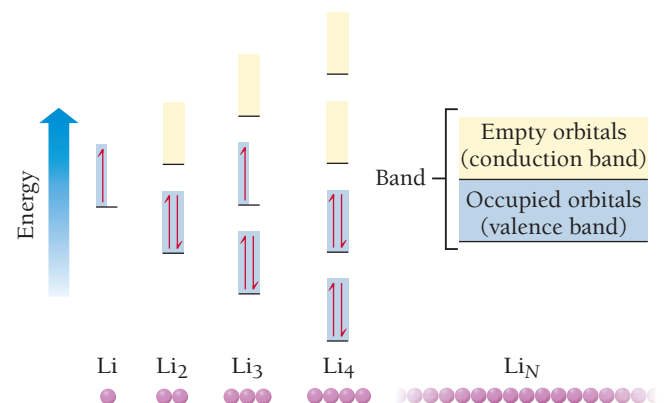
Recall from Section 12.4 the simple model for bonding in metals called the electron sea model. We now turn to a model for bonding in solids that is both more sophisticated and more broadly applicable—it applies to both metallic solids and covalent solids. The model is **band theory**, and it grows out of molecular orbital theory, first discussed in Section 6.4.

Molecular Orbitals and Energy Bands

Recall that in molecular orbital theory, we combine the atomic orbitals of the atoms within a molecule to form molecular orbitals. These molecular orbitals are not localized on individual atoms, but *delocalized over the entire molecule*. Similarly, in band theory, we combine the atomic orbitals of the atoms within a solid crystal to form orbitals that are not localized on individual atoms, but delocalized over the entire *crystal*. In some sense then, the crystal is like a very large molecule, and its valence electrons occupy the molecular orbitals formed from the atomic orbitals of each atom in the crystal.

Consider a series of molecules constructed from individual lithium atoms. The energy levels of the atomic orbitals and resulting molecular orbitals for Li , Li_2 , Li_3 , Li_4 , and Li_N (where N is a large number on the order of 10^{23}) are shown in **Figure 12.21** ▲. The lithium atom has a single electron in a single $2s$ atomic orbital. The Li_2 molecule contains two electrons and two molecular orbitals. The electrons occupy the lower-energy bonding orbital—the higher-energy, or antibonding, molecular orbital is empty. The Li_4 molecule contains four electrons and four molecular orbitals. The electrons occupy the two bonding molecular orbitals—the two antibonding orbitals are completely empty.

The Li_N molecule contains N electrons and N molecular orbitals. However, because there are so many molecular orbitals, the energy spacings between them are infinitesimally small; they are no longer discrete energy levels, but rather they form a *band* of energy levels. One-half of the orbitals in the band ($N/2$) are bonding molecular orbitals and (at 0 K) contain the N valence electrons; this band is called the **valence band**. The other $N/2$ molecular orbitals are antibonding and (at 0 K) are completely empty; this band is called the **conduction band**.



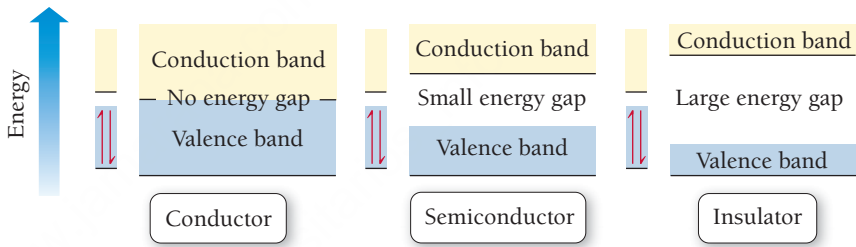
▲ **FIGURE 12.21** Energy Levels of Molecular Orbitals in Lithium Molecules When many Li atoms are present, the energy levels of the molecular orbitals are so closely spaced that they fuse to form a band. Half of the orbitals are bonding orbitals and contain valence electrons; the other half are antibonding orbitals and are empty.

If the atoms composing a solid have *p* orbitals available, then the same process leads to another set of bands at higher energies.

In lithium metal, the highest occupied molecular orbital lies in the middle of a band of orbitals, and the energy difference between it and the next higher-energy orbital is infinitesimally small. Therefore, above 0 K, electrons readily make the transition from the valence band to the conduction band. Because electrons in the conduction band are mobile, lithium, like all metals, is a good electrical conductor. Mobile electrons in the conduction band are also responsible for the thermal conductivity of metals. When a metal is heated, electrons are excited to higher-energy molecular orbitals. These electrons quickly transport the thermal energy throughout the crystal lattice.

In metals, the valence band and conduction band are energetically continuous—the energy difference between the top of the valence band and the bottom of the conduction band is infinitesimally small. In semiconductors and insulators, however, an energy gap, called the **band gap**, exists between the valence band and conduction band as shown in **Figure 12.22** ▼. Band gaps are usually specified in units of electron volts or eV ($1\text{ eV} = 1.602 \times 10^{-19}\text{ J}$). In insulators, the band gap is large, and electrons are not promoted into the conduction band at ordinary temperatures, resulting in no electrical conductivity. In semiconductors, the band gap is smaller. As a result, the conductivity of semiconductors increases with increasing temperature because heat allows a greater number of electrons to be thermally promoted into the conduction band.

► **FIGURE 12.22 Band Gap** In a conductor there is no energy gap between the valence band and the conduction band. In semiconductors there is a small energy gap, and in insulators there is a large energy gap.



The group 4A elements exhibit a range of band gaps, as shown in Table 12.1.

TABLE 12.1 Band Gap of Group 4A Elements

Group 4A Element	Atomic Radius (pm)	Band Gap	Classification
Carbon (diamond)	77	5.5 eV	Insulator
Silicon	118	1.11 eV	Semiconductor
Germanium	122	0.67 eV	Semiconductor
Tin	140	0.08 eV	Metal
Lead	180	none	Metal

Notice that the band gap decreases as we move down the column of elements. Why? We know from our discussion of periodic properties (see Section 3.6) that atomic radius increases as we move down a column in the periodic table. The increasing radius reduces the overlap between orbitals on neighboring atoms, which in turns reduces the energy difference between the antibonding orbitals (the conduction band) and the bonding orbitals (the valence band).

Doping: Controlling the Conductivity of Semiconductors

Doped semiconductors contain minute amounts of impurities that result in either additional electrons in the conduction band or electron “holes” in the valence band. For example, silicon is a group 4A semiconductor. Its valence electrons just fill its valence band. The band gap in silicon is large enough that only a few electrons are promoted into the conduction band at room temperature; therefore, silicon is a poor electrical conductor. However, silicon can be doped with phosphorus, a group 5A element with five valence electrons, to increase its conductivity. The phosphorus atoms are incorporated into the silicon crystal structure, and

each phosphorus atom brings with it one additional electron. Since the valence band is completely full, the additional electrons must go into the conduction band.

These additional electrons are then mobile and can conduct electrical current. This type of semiconductor is called an **n-type semiconductor** because the charge carriers are *negatively* charged electrons in the conduction band.

Silicon can also be doped with a group 3A element, such as gallium, which has only three valence electrons. When gallium is incorporated into the silicon crystal structure, gallium atoms trap some of the electrons in silicon's valence band, resulting in electron "holes," or empty molecular orbitals, in the valence band. The presence of holes also allows for the movement of electrical current because electrons in the valence band can move between holes. In this way, the holes move in the opposite direction as the electrons. This type of semiconductor is called a **p-type semiconductor** because each hole acts as a *positive* charge.

The heart of most modern electronic devices are silicon chips containing millions of **p-n junctions**, tiny spots that are p-type on one side and n-type on the other. These junctions can serve a number of functions including acting as **diodes** (circuit elements that allow the flow of electrical current in only one direction) or amplifiers (elements that amplify a small electrical current into a larger one).

Semiconductor Type

Which element would you dope into germanium to create an n-type semiconductor?

- (a) indium (b) tin (c) arsenic

12.5

Cc

Conceptual
Connection

12.9 Polymers and Plastics

Polymers are long, chainlike molecules composed of repeating units called **monomers**. In Chapter 21, we will discuss natural polymers such as starches, proteins, and DNA, which play important roles in living organisms. In this section, we learn about synthetic polymers, which we encounter daily in plastic products such as PVC tubing, styrofoam coffee cups, nylon rope, and plexiglass windows. Polymeric materials are common, found in everything from computers to toys to packaging materials. Most polymers are durable, partly because of the length of their molecules. In general, the longer the length of a molecule, the greater the intermolecular forces between molecules and the higher the melting point and boiling point of the substance. Because breaking or tearing a polymeric material involves either overcoming the intermolecular forces between chains or actually breaking the covalent bonds between monomers, polymers tend to be durable materials.

One of the simplest synthetic polymers is polyethylene. The polyethylene monomer is ethene (also called ethylene):



Ethene or ethylene

Ethene monomers react with each other, breaking the double bond between carbons and bonding together to form a long polymer chain:



Polyethylene is an **addition polymer**, a polymer in which the monomers link together without the elimination of any atoms. Polyethylene is the plastic that is used for milk jugs, juice containers, and garbage bags.

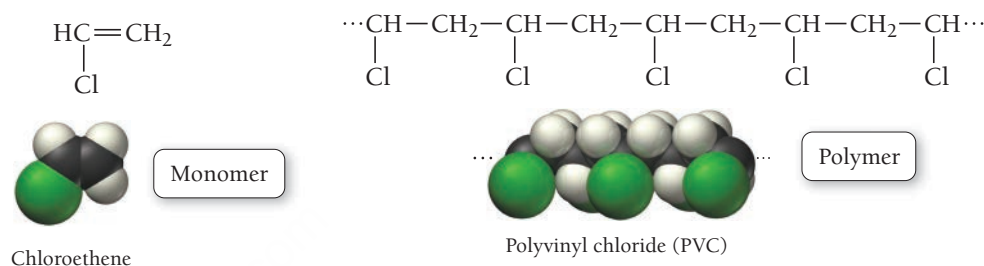
The properties of polyethylene depend on the exact structure of the ethylene chain and the resulting structure of the material. Although polymers are generally amorphous, they can have regions of crystallinity. For polyethylene, the degree of crystallinity depends in part on the degree of branching in



▲ **FIGURE 12.23 Polyethylene**
Plastic milk bottles are made from polyethylene.

the chain. *High-density polyethylene (HDPE)*, for example, has little branching, so that the chains can align more closely to one another, resulting in high crystallinity, high density, and good strength and heat resistance. Common plastic milk jugs are made of HDPE (**Figure 12.23** ◀). *Low-density polyethylene (LDPE)*, in contrast, has more highly branched chains. This branching prevents the chains from interacting as efficiently, resulting in lower crystallinity, lower density, and lower strength and heat resistance. Many common plastic bags are made of LDPE.

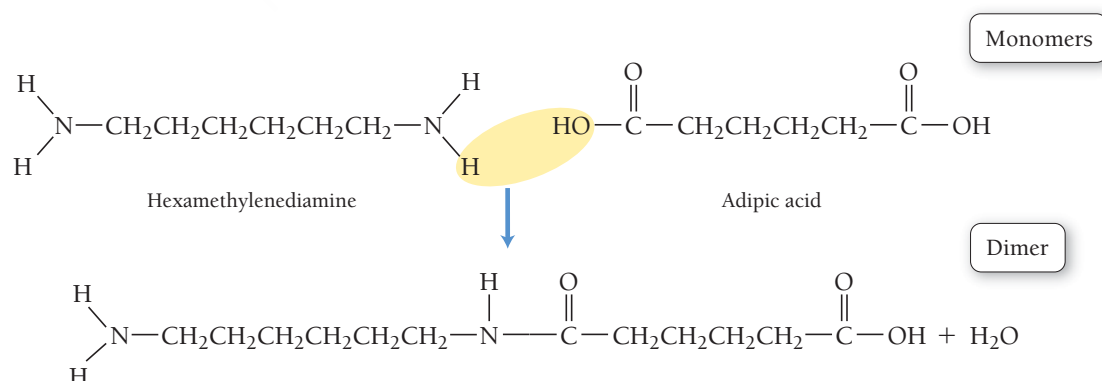
Substituted polyethylenes make up an entire class of polymers. For example, polyvinyl chloride (PVC)—the plastic used to make certain kinds of pipes and plumbing fixtures—is composed of monomers in which a chlorine atom has been substituted for one of the hydrogen atoms in ethene (**Figure 12.24** ▼). These monomers, which are shown here, react to form PVC:



▲ **FIGURE 12.24 Polyvinyl Chloride** Polyvinyl chloride is used for many plastic plumbing supplies, such as pipes and connectors.


Table 12.2 lists several other substituted polyethylene polymers.

Some polymers—called **copolymers**—consist of two different kinds of monomers. For example, the monomers that compose nylon 6,6 are hexamethylenediamine and adipic acid. These two monomers add together via a condensation reaction as follows:



The product that forms between the reaction of two monomers is a **dimer**. The polymer (nylon 6,6) forms as the dimer continues to add more monomers. Polymers that eliminate an atom or a small group of atoms during polymerization are called **condensation polymers**. The condensation polymer nylon 6,6 and other similar nylons can be drawn into fibers and used to make consumer products such as panty hose, carpet fibers, and fishing line. Table 12.2 shows other condensation polymers.

TABLE 12.2 Polymers of Commercial Importance

Polymer	Structure	Uses
Addition Polymers		
Polyethylene	$\text{-(CH}_2\text{—CH}_2\text{)}_n$	Films, packaging, bottles
Polypropylene	$\left[\text{CH}_2\text{—CH}_2 \right]_n$ CH ₃	Kitchenware, fibers, appliances
Polystyrene	$\left[\text{CH}_2\text{—CH} \right]_n$ 	Packaging, disposable food containers, insulation
Polyvinyl chloride	$\left[\text{CH}_2\text{—CH} \right]_n$ Cl	Pipe fittings, clear film for meat packaging
Condensation Polymers		
Polyurethane	$\left[\text{C(=O)—NH—R—NH—C(=O)—O—R'—O} \right]_n$ R, R' = —CH ₂ —CH ₂ — (for example)	“Foam” furniture stuffing, spray-on insulation, automotive parts, footwear, water-protective coatings
Polyethylene terephthalate (a polyester)	$\left[\text{O—CH}_2\text{—CH}_2\text{—O—C(=O)—C}_6\text{H}_4\text{—C(=O)} \right]_n$	Tire cord, magnetic tape, apparel, soda bottles
Nylon 6,6	$\left[\text{NH—(CH}_2\text{)}_6\text{—NH—C(=O)—(CH}_2\text{)}_4\text{—C(=O)} \right]_n$	Home furnishings, apparel, carpet fibers, fish line, polymer blends

SELF-ASSESSMENT

QUIZ



- An X-ray beam of $\lambda = 71.07$ pm is incident on the surface of an atomic crystal. The maximum reflection occurs at an angle of 39.8° . Calculate the separation between layers of atoms in the crystal (assume $n = 1$).
a) 90.1 pm b) 41.2 pm c) 111 pm d) 55.5 pm
- A crystalline solid has a body-centered cubic structure. If the radius of the atoms is 172 pm, what is the edge length of the unit cell?
a) 397 pm b) 344 pm c) 486 pm d) 688 pm
- What is the coordination number (the number of atoms each atom touches) in a face-centered cubic unit cell?
a) 4 b) 6 c) 8 d) 12
- How many atoms are in a body-centered cubic unit cell?
a) 1 b) 2 c) 4 d) 5
- What is the packing efficiency of the face-centered cubic unit cell?
a) 52% b) 68% c) 74% d) 88%
- What is the edge length of a body-centered cubic unit cell made up of atoms that each has a radius of 168 pm?
a) 388 pm b) 336 pm c) 475 pm d) 84 pm
- Rhodium crystallizes in a face-centered cubic unit cell. The radius of a rhodium atom is 135 pm. Determine the density of rhodium in g/cm^3 .
a) 3.07 g/cm^3 b) 12.4 g/cm^3
c) 278 g/cm^3 d) 0.337 g/cm^3

KEY CONCEPTS

Crystalline Structures (12.2–12.3)

- X-ray crystallography uses the diffraction pattern of X-rays to determine the crystal structure of solids.
- The crystal lattice is represented by a unit cell, a structure that reproduces the entire lattice when repeated in three dimensions.
- Three basic cubic unit cells are the simple cubic, the body-centered cubic, and the face-centered cubic.
- Some crystal lattices can also be depicted as closest-packed structures, including the hexagonal closest-packing structure (not cubic) and the cubic closest-packing structure (which has a face-centered cubic unit cell).

Types of Crystalline Solids (12.4)

- The basic types of crystalline solids are molecular, ionic, and atomic solids. We divide atomic solids into three different types: nonbonding, metallic, and covalent.

Structure of Ionic Solids (12.5)

- Ionic solids have structures that accommodate both cations and anions.
- Common cubic structures for ionic compounds include the cesium chloride structure, the rock salt structure, the zinc blende structure, the fluorite structure, and the antiferite structure.

Network Covalent Atomic Solids (12.6)

- Carbon forms the network covalent atomic solids graphite and diamond.
- SiO_2 forms the network covalent atomic solid quartz.

Ceramics, Cement, and Glass (12.7)

- Ceramics are inorganic nonmetallic solids that are prepared from powders typically mixed with water, formed into the desired shape,

and then heated. Ceramic are usually hard, strong, nonconductive, and brittle.

- Cement is a powdered mixture consisting mostly of limestone (CaCO_3) and silica (SiO_2), with smaller amounts of other substances. When cement is mixed with water, it reacts to form a hard, stone-like substance.
- Glass is primarily amorphous SiO_2 or silica. Silicate glass is transparent, impervious to water, and an outstanding material for making windows and drinking vessels.

Semiconductors and Band Theory (12.8)

- Band theory is a model for bonding in solids in which the atomic orbitals of the atoms are combined and delocalized over the entire crystal solid. In band theory, solids form energy bands that are occupied by electrons.
- In metals, the valence band (composed of bonding molecular orbitals) is continuous with the conduction band (composed of antibonding molecular orbitals).
- Semiconductors have a small energy gap—called the band gap—between the valence band and the conduction band.
- Semiconductors can be doped with small amounts of impurities to modify their conductivity.

Polymers and Plastics (12.9)

- Polymers are long, chainlike molecules that consist of repeating units called monomers. They can be natural or synthetic.
- Polyethylene is an addition polymer, a polymer formed without the elimination of any atoms.
- Condensation polymers, such as nylon, are formed by the elimination of small groups of atoms.

KEY EQUATIONS AND RELATIONSHIPS

Bragg's Law: Relationship between Light Wavelength (λ), Angle of Reflection (θ), and Distance (d) between the Atomic Layers (12.2)

$$n\lambda = 2d \sin \theta \quad (n = \text{integer})$$

EXERCISES

REVIEW QUESTIONS

1. What is graphene? Why is graphene unique?
2. Explain the basic principles involved in X-ray crystallography. Include Bragg's law in your explanation.
3. What is a crystalline lattice? How is the lattice represented with the unit cell?
4. Make a drawing of each unit cell: simple cubic, body-centered cubic, and face-centered cubic.
5. For each of the cubic cells in the previous problem, give the coordination number, edge length in terms of r , and number of atoms per unit cell.
6. What is the difference between hexagonal closest packing and cubic closest packing? What are the unit cells for each of these structures?
7. What are the three basic types of solids and the composite units of each? What types of forces hold each type of solid together?
8. What are the three categories of atomic solids?
9. What kinds of forces hold each of the three basic categories of atomic solids together?
10. What is a polymorph?
11. In an ionic compound, how are the relative sizes of the cation and anion related to the coordination number of the crystal structure?
12. Show how the cesium chloride, sodium chloride, and zinc blende unit cells each contain a cation-to-anion ratio of 1:1.
13. Show how the fluorite structure accommodates a cation-to-anion ratio of 1:2.

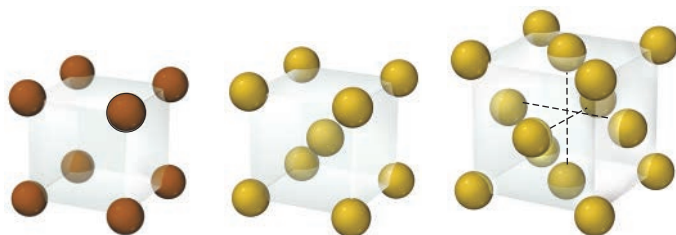
14. Name and describe the different allotropes of carbon.
15. What are silicates? What is quartz?
16. What is the definition of a *ceramic*? What are the three categories of ceramics?
17. List the major and minor components of Portland cement. What is the difference between the hardening process of Portland cement and the hardening process of clays?
18. How is concrete made from Portland cement? What advantage does concrete have for building compared to the construction methods that predated the development of concrete?
19. Describe what happens on the molecular level when silica is heated and then cooled to make glass.
20. Describe the difference between vitreous silica and soda-lime glass. What are some advantages and disadvantages of each of these types of glass?
21. In band theory of bonding for solids, what is a *band*? What is the difference between the *valence band* and the *conduction band*?
22. In band theory of bonding for solids, what is a band gap? How does the band gap differ in metals, semiconductors, and insulators?
23. Explain how doping can increase the conductivity of a semiconductor. What is the difference between an n-type semiconductor and a p-type semiconductor?
24. What is the trend in the size of the band gap as you move down the column of the group 4A elements?
25. What is a polymer? What is the difference between a polymer and a copolymer?
26. How do an addition polymer and a condensation polymer differ from each other?

PROBLEMS BY TOPIC

Note: Answers to all odd-numbered problems, numbered in blue, can be found in Appendix III. Exercises in the Problems by Topic section are paired, with each odd-numbered problem followed by a similar even-numbered problem. Exercises in the Cumulative Problems section are also paired but more loosely. Because of their nature, Challenge Problems and Conceptual Problems are unpaired.

Types of Solids and Their Structures

27. An X-ray beam with $\lambda = 154$ pm incident on the surface of a crystal produced a maximum reflection at an angle of $\theta = 28.3^\circ$. Assuming $n = 1$, calculate the separation between layers of atoms in the crystal.
28. An X-ray beam of unknown wavelength is diffracted from a NaCl surface. If the interplanar distance in the crystal is 286 pm and the angle of maximum reflection is found to be 7.23° , what is the wavelength of the X-ray beam? (Assume $n = 1$.)
29. Determine the number of atoms per unit cell for each metal.

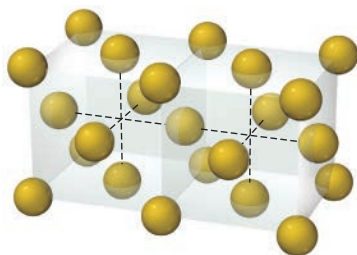


a. Polonium

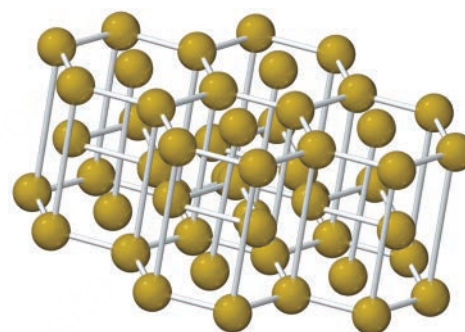
b. Tungsten

c. Nickel

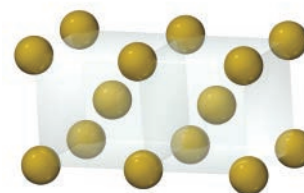
30. Determine the coordination number for each structure.



a. Gold



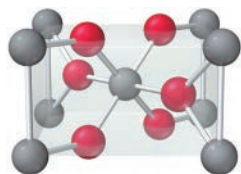
b. Ruthenium



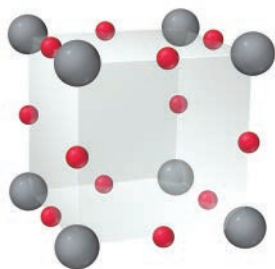
c. Chromium

31. Calculate the packing efficiency of the body-centered cubic unit cell. Show your work.
32. Calculate the packing efficiency of the face-centered cubic unit cell. Show your work.
33. Platinum crystallizes with the face-centered cubic unit cell. The radius of a platinum atom is 139 pm. Calculate the edge length of the unit cell and the density of platinum in g/cm^3 .
34. Molybdenum crystallizes with the body-centered unit cell. The radius of a molybdenum atom is 136 pm. Calculate the edge length of the unit cell and the density of molybdenum.
35. Rhodium has a density of $12.41 \text{ g}/\text{cm}^3$ and crystallizes with the face-centered cubic unit cell. Calculate the radius of a rhodium atom.
36. Barium has a density of $3.59 \text{ g}/\text{cm}^3$ and crystallizes with the body-centered cubic unit cell. Calculate the radius of a barium atom.

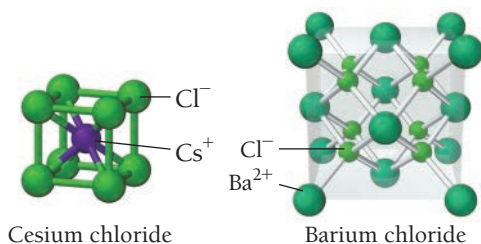
37. Polonium crystallizes with a simple cubic structure. It has a density of 9.3 g/cm^3 , a radius of 167 pm , and a molar mass of 209 g/mol . Use these data to calculate Avogadro's number (the number of atoms in one mole).
38. Palladium crystallizes with a face-centered cubic structure. It has a density of 12.0 g/cm^3 , a radius of 138 pm , and a molar mass of 106.42 g/mol . Use these data to calculate Avogadro's number.
39. Identify each solid as molecular, ionic, or atomic.
a. Ar(s) b. $\text{H}_2\text{O(s)}$ c. $\text{K}_2\text{O(s)}$ d. Fe(s)
40. Identify each solid as molecular, ionic, or atomic.
a. $\text{CaCl}_2\text{(s)}$ b. $\text{CO}_2\text{(s)}$ c. Ni(s) d. $\text{I}_2\text{(s)}$
41. Which solid has the highest melting point? Why?
 Ar(s) , $\text{CCl}_4\text{(s)}$, LiCl(s) , $\text{CH}_3\text{OH(s)}$
42. Which solid has the highest melting point? Why?
 C(s, diamond) , Kr(s) , NaCl(s) , $\text{H}_2\text{O(s)}$
43. Which solid in each pair has the higher melting point and why?
a. $\text{TiO}_2\text{(s)}$ or HOOH(s) b. $\text{CCl}_4\text{(s)}$ or $\text{SiCl}_4\text{(s)}$
c. Kr(s) or Xe(s) d. NaCl(s) or CaO(s)
44. Which solid in each pair has the higher melting point and why?
a. Fe(s) or $\text{CCl}_4\text{(s)}$ b. KCl(s) or HCl(s)
c. Ti(s) or Ne(s) d. $\text{H}_2\text{O(s)}$ or $\text{H}_2\text{S(s)}$
45. An oxide of titanium crystallizes with the unit cell shown here (titanium = gray; oxygen = red). What is the formula of the oxide?



46. An oxide of rhenium crystallizes with the unit cell shown here (rhenium = gray; oxygen = red). What is the formula of the oxide?

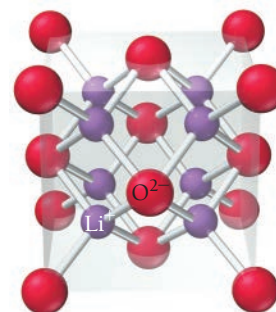


47. The unit cells for cesium chloride and barium(II) chloride are shown here. Show that the ratio of cations to anions in each unit cell corresponds to the ratio of cations to anions in the formula of each compound.

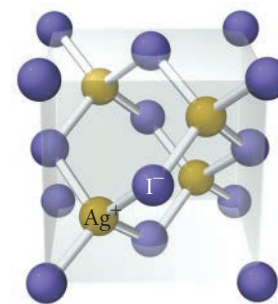


48. The unit cells for lithium oxide and silver iodide are shown at the top of the next column. Show that the ratio of cations to anions

in each unit cell corresponds to the ratio of cations to anions in the formula of each compound.



Lithium oxide



Silver iodide

49. Identify the structure of each of the two unit cells shown in Problem 47 as the rock salt structure, zinc blende structure, fluorite structure, antifluorite structure, or none of these.
50. Identify the structure of each of the two unit cells shown in Problem 48 as the rock salt structure, zinc blende structure, fluorite structure, antifluorite structure, or none of these.
51. Consider the rock salt structure in Figure 12.13. What type of structure would result if all the anions were somehow removed, leaving only one type of atom?
52. Consider the zinc blende structure in Figure 12.14. What type of structure would result if the remaining tetrahedral sites in the unit cell were also filled with cations?

Ceramics, Cement, and Glass

53. Classify each of the following as a component of a silicate ceramic, an oxide ceramic, or a nonoxide ceramic.
a. B_4C b. Mg_2SiO_4 c. MoSi_2
54. Classify each of the following as a component of a silicate ceramic, an oxide ceramic, or a nonoxide ceramic.
a. TiB_2 b. ZrO_2 c. $\text{NaAlSi}_3\text{O}_8$
55. What are the name and formula of the compound commonly used in the manufacture of glass to reduce its tendency to crack or shatter under thermal shock?
56. What are the name and formula of the compound commonly used in the manufacture of glass to increase the index of refraction?
57. One of the key components in the manufacture of Portland cement is Ca_3SiO_5 , a compound that is obtained by firing the reactants in a kiln at $1400\text{--}1500^\circ\text{C}$. Assign an oxidation state to each element in this compound.
58. Replacement of aluminum ions in kaolinite with magnesium ions yields a compound with the formula $\text{Mg}_3\text{Si}_2\text{O}_5(\text{OH})_4$. Assign an oxidation state to each element in this compound.

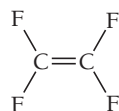
Semiconductors and Band Theory

59. Which solid would you expect to have little or no band gap?
a. Zn(s) b. Si(s) c. As(s)
60. Which solid would you expect to have the largest band gap?
a. As(s) b. Sb(s) c. Bi(s)
61. How many molecular orbitals are present in the conduction band of a lithium crystal with a mass of 11.2 g ?

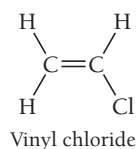
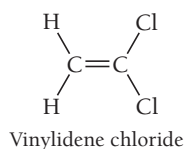
62. How many molecular orbitals are present in the valence band of a sodium crystal with a mass of 5.45 g?
63. A substance has a band gap of 6.9 eV at 273 K. Is this substance best classified as an insulator, a semiconductor, or a metal?
64. A substance has a band gap of 0.85 eV at 273 K. Is this substance best classified as an insulator, a semiconductor, or a metal?
65. Indicate if each solid forms an n-type or a p-type semiconductor.
- germanium doped with gallium
 - silicon doped with arsenic
66. Indicate if each solid forms an n-type or a p-type semiconductor.
- silicon doped with gallium
 - germanium doped with antimony
67. Does a photon of red light with a frequency of 4.29×10^{14} Hz have sufficient energy to promote an electron from the valence band to the conduction band in a sample of silicon (the band gap in silicon is 1.11 eV)?
68. Which wavelength of light (in nm) is emitted if an electron moves from the conduction band to the valence band in a sample of diamond (diamond has a band gap of 5.5 eV)?

Polymers

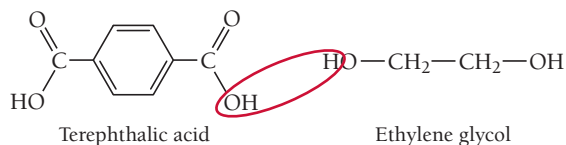
69. Teflon is an addition polymer formed from the monomer shown here. Draw the structure of the polymer.



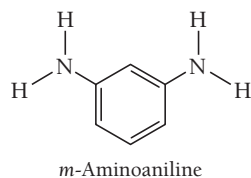
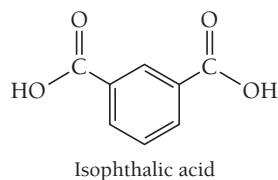
70. Saran, the polymer used to make saran wrap, is an addition polymer formed from two monomers—vinylidene chloride and vinyl chloride. Draw the structure of the polymer. (*Hint:* The monomers alternate.)



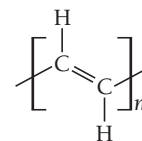
71. One kind of polyester is a condensation copolymer formed from terephthalic acid and ethylene glycol. Draw the structure of the dimer. [*Hint:* Water (circled) is eliminated when the bond between the monomers forms.]



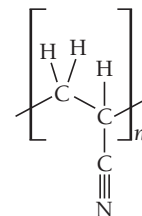
72. Nomex, a condensation copolymer used by firefighters because of its flame-resistant properties, forms from isophthalic acid and *m*-aminoaniline. Draw the structure of the dimer. (*Hint:* Water is eliminated when the bond between the monomers forms.)



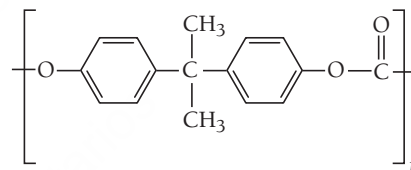
73. Polyacetylene is an addition polymer with the structure shown here. Draw the structure of the monomer.



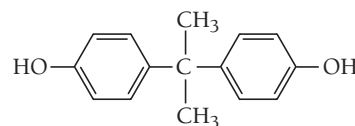
74. Polyacrylonitrile (PAN) is an addition polymer with the structure shown here. Draw the structure of the monomer.



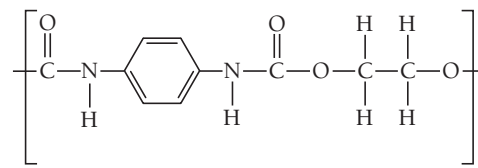
75. The polycarbonate Lexan is a condensation polymer and has the structure shown here:



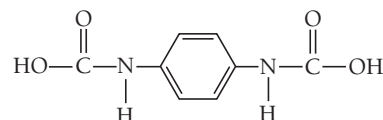
Assuming this polymer was formed from the monomer shown here plus another monomer, provide a structure of the other monomer that would be required to form Lexan.



76. Consider the following condensation polymer with the structure shown here:

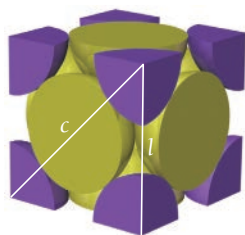


Assuming this polymer was formed from the monomer shown here plus another monomer, provide a structure of the other monomer that would be required to form this polymer.

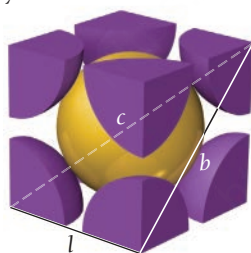


CUMULATIVE PROBLEMS

77. Silver iodide crystallizes in the zinc blende structure. The separation between nearest-neighbor cations and anions is approximately 325 pm, and the melting point is 558°C. Cesium chloride, by contrast, crystallizes in the structure shown in Figure 12.12. Even though the separation between nearest-neighbor cations and anions is greater (348 pm), the melting point of cesium chloride is higher (645 °C). Explain.
78. Copper iodide crystallizes in the zinc blende structure. The separation between nearest-neighbor cations and anions is approximately 311 pm, and the melting point is 606 °C. Potassium chloride, by contrast, crystallizes in the rock salt structure. Even though the separation between nearest-neighbor cations and anions is greater (319 pm), the melting point of potassium chloride is higher (776 °C). Explain.
79. Consider the face-centered cubic structure shown here:



- What is the length of the line (labeled c) that runs diagonally across one of the faces of the cube in terms of r (the atomic radius)?
 - Use the answer to part a and the Pythagorean theorem to derive the expression for the edge length (l) in terms of r .
80. Consider the body-centered cubic structure shown here:



- What is the length of the line (labeled c) that runs from one corner of the cube diagonally through the center of the cube to the other corner in terms of r (the atomic radius)?
- Use the Pythagorean theorem to derive an expression for the length of the line (labeled b) that runs diagonally across one of the faces of the cube in terms of the edge length (l).
- Use the answer to parts a and b along with the Pythagorean theorem to derive the expression for the edge length (l) in terms of r .

- The volume of a unit cell of diamond is 0.0454 nm^3 , and the density of diamond is 3.52 g/cm^3 . Find the number of carbon atoms in a unit cell of diamond.
- The density of an unknown metal is 12.3 g/cm^3 , and its atomic radius is 0.134 nm . It has a face-centered cubic lattice. Find the atomic mass of this metal.
- An unknown metal is found to have a density of 7.8748 g/cm^3 and to crystallize in a body-centered cubic lattice. The edge of the unit cell is 0.28664 nm . Calculate the atomic mass of the metal.
- When spheres of radius r are packed in a body-centered cubic arrangement, they occupy 68.0% of the available volume. Use the fraction of occupied volume to calculate the value of a , the length of the edge of the cube, in terms of r .
- Potassium chloride crystallizes in the rock salt structure. Estimate the density of potassium chloride using the ionic radii provided in Chapter 3.
- Calculate the fraction of empty space in cubic closest packing to five significant figures.
- A tetrahedral site in a closest-packed lattice is formed by four spheres at the corners of a regular tetrahedron. This is equivalent to placing the spheres at alternate corners of a cube. In such a closest-packed arrangement, the spheres are in contact, and if the spheres have a radius r , the diagonal of the face of the cube is $2r$. The tetrahedral hole is inside the middle of the cube. Find first the length of the body diagonal of this cube and then the radius of the tetrahedral hole.
- X-ray diffractometers often use metals that have had their core electrons excited as a source of X-rays. Consider the $2p \rightarrow 1s$ transition for copper, which is called the $K\alpha$ transition. Calculate the wavelength of X-rays (in Å) given off by the $K\alpha$ transition if the energy given off by a mole of copper atoms is $7.77 \times 10^5 \text{ kJ}$.
- Why is it necessary to use the $K\alpha$ transition ($2p \rightarrow 1s$) in copper (see Problem 88) to generate X-rays? Why not use, for example, the $4s \rightarrow 3p$ transition?
- In certain cases where X-ray diffraction is unsuitable for determining the structure of a crystal, *neutron diffraction* can be used. Instead of X-rays, a beam of neutrons is used to analyze the sample. Calculate the velocity of a beam of neutrons with a wavelength of 2.00 Å .

CHALLENGE PROBLEMS

- The structure of the addition polymer polypropylene is shown in Table 12.2.
 - Draw the structure of the monomer.
 - Show how an alternate version of the polypropylene polymer (with a different arrangement) could be formed from the monomer you found in part a.
- Perovskite is a compound with a cubic unit cell and has a strontium atom at the center of the cell, titanium atoms at the corners of the unit cell, and oxygen atoms at the centers of each edge of the unit cell.
 - What is the formula of perovskite?
 - What is the coordination number of strontium in the perovskite structure?
 - If the edge length of the unit cell is 3.905 Å , calculate the density of perovskite in g/cm^3 .

93. A compound with the formula Rb_3C_{60} has been shown to demonstrate superconductivity below 30.0 K. Given that the C_{60} molecules have a face-centered cubic arrangement, which of the tetrahedral and octahedral sites are occupied by Rb atoms?
94. Despite Dalton's laws, it is now known that many ionic compounds do not always contain atoms in small integer ratios. For example, a sample of iron(II) oxide may, in fact, contain a significant amount of Fe^{3+} in addition to Fe^{2+} . This is an example of a *nonstoichiometric* compound. A sample of iron(II) oxide is found to be 75.65% iron by mass. Determine the percentage of Fe^{3+} ions in the sample.

CONCEPTUAL PROBLEMS

95. During the glass manufacturing process, the liquid must be cooled relatively quickly to form the glass. Why?
96. Why are X-rays used for crystallography? Why not use some other, more accessible type of electromagnetic radiation such as ultraviolet light?
97. Compare the crystal structure of diamond (C) and zinc blende (ZnS). What are the key similarities and differences between the two structures?
98. In X-ray crystallography, a small amount of oil is often used to mount the crystal sample on a glass fiber. Explain why neither the oil nor the glass fiber interferes with the diffraction pattern of the crystal.
99. Which is not likely to lead to an increase in electrical conductivity?
- increasing the temperature of a semiconductor
 - choosing a semiconductor with a smaller band gap
 - doping the semiconductor
 - All of the above would likely lead to an increase in electrical conductivity.

QUESTIONS FOR GROUP WORK

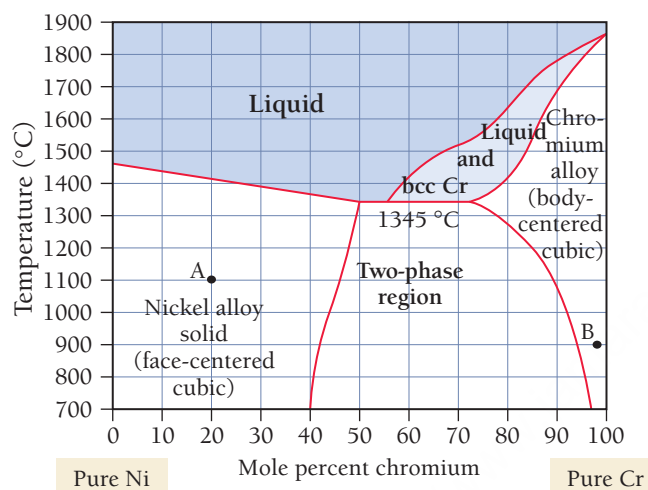
Active Classroom Learning

Discuss these questions with the group and record your consensus answer.

100. Have each group member select one of the cubic crystalline lattices. Learn everything you can about your lattice, and present it to the group.
101. Using group members to play the role of atoms or molecules, demonstrate the main structural features of the following categories of crystalline solids: molecular solid, ionic solid, nonbonded solid, metallic solid, and network covalent solid. Clearly identify what each individual represents and how you are representing various interactions between particles (e.g., covalent bond, ionic bond, etc.).
102. List the questions you would need to ask in order to classify a solid into one of the categories of crystalline solids (molecular solid, ionic solid, nonbonded solid, metallic solid, and network covalent solid). In what sequence is it best to ask them? (*Hint:* You may need a branching decision tree.) Once you have agreed on a good set of questions, have each group member choose a substance from the chapter, and have the other group members ask the questions from the list in turn until the correct classification is reached. Group members may agree to edit the list if they discover ways to improve it while using it.
103. Have each group member select and study a material from Section 12.7 on ceramics, cement, and glass. Take turns describing your material to the group, and see if group members can identify the type of material based on your description (without consulting the text).
104. Describe how a common object or toy (e.g., a train, building blocks, or beads on a string) could represent the structure of a polymer. Describe how you can represent the following terms using your model: monomer, dimer, addition polymer, condensation polymer, branching.

DATA INTERPRETATION AND ANALYSIS

105. An *alloy* is a metallic mixture composed of two or more elements. As is the case in all mixtures, the relative amounts of the elements in an alloy can vary. In some cases, the components of an alloy can have different crystal structures. For example, a nickel-chromium alloy consists of nickel, which has a face-centered cubic structure, and chromium, which has a body-centered cubic structure. Which structure does the alloy adopt? It depends on the relative compositions. The phase diagrams for alloys such as these reveal the structure as a function of the alloy composition. For example, the nickel and chromium phase diagram from 700°C to 1900°C is shown here:



▲ Cr-Ni Phase Diagram

Notice that the diagram has two different solid phases: face-centered cubic and body-centered cubic. From pure nickel (0 mol % chromium) to about 40–50 mol % chromium, the structure is face-centered cubic. In this structure, Cr atoms substitute for Ni atoms in the face-centered cubic structure of nickel. However, when an amount of chromium beyond a certain percentage (which depends on temperature) is added, that structure is no longer stable. At the other end of the diagram, from pure chromium to about 75% chromium (depending on temperature), the structure is body-centered cubic, with nickel substituting into the body-centered cubic structure of the chromium. The region in between the two phases is called the *two-phase region*. At these compositions, the two phases (nickel-rich face-centered cubic and chromium-rich body-centered cubic) exist together (the solution is not homogeneous in this region). Use the phase diagram to answer the following questions.

- What is the relative composition of the mixture at point A? At what temperature does a solid mixture having this composition melt?
- Is it possible to have a homogeneous solid mixture that is 50% Ni and 50% Cr? If so, what crystalline structure would it have?
- What is the relative composition at point B? What is the crystalline structure at point B?
- At what temperature does the solid present at point B begin to melt?

ANSWERS TO CONCEPTUAL CONNECTIONS

- Cc 12.1 The face-centered cubic unit cell has four atoms per unit cell.
- Cc 12.2 (a) MgO is an ionic solid, which means that the forces holding the solid together are strong ionic bonds. The other two substances are $I_2(s)$, a molecular solid, and Kr(s), a nonbonding atomic solid. These two solids are held together by dispersion forces and will therefore have much lower melting points.
- Cc 12.3 (c) The zinc blende structure occurs in ionic compounds with a one-to-one cation-to-anion ratio in which the cation is much smaller than the anion.
- Cc 12.4 An increase in pressure favors the denser phase, in this case diamond.
- Cc 12.5 (a) Since indium has three valence electrons and germanium has four, the presence of indium would introduce holes into the valence band, resulting in a p-type semiconductor.

13.1 Antifreeze in Frogs 539

13.2 Types of Solutions and Solubility 540

13.3 Energetics of Solution Formation 544

13.4 Solution Equilibrium and Factors Affecting Solubility 548

13.5 Expressing Solution Concentration 552

13.6 Colligative Properties: Vapor Pressure Lowering, Freezing Point Depression, Boiling Point Elevation, and Osmotic Pressure 558

13.7 Colligative Properties of Strong Electrolyte Solutions 569

Key Learning Outcomes 573



The wood frog protects its cells by flooding them with glucose, which acts as an antifreeze.

CHAPTER

13

Solutions

RECALL FROM Chapter 1 that matter often exists in the form of a mixture, two or more different types of particles mixed together. In this chapter, we focus on homogeneous mixtures, also known as solutions. Solutions are mixtures in which atoms, ions, and molecules intermingle on the molecular and atomic scale. Common examples of solutions include ocean water, gasoline, and air. In this chapter we answer the question: Why do solutions form? We also discuss how the properties of solutions differ from the properties of the pure substances that compose the solutions. As you read this chapter, keep in mind the large number of solutions that surround you at every moment, including those that exist within your own body.

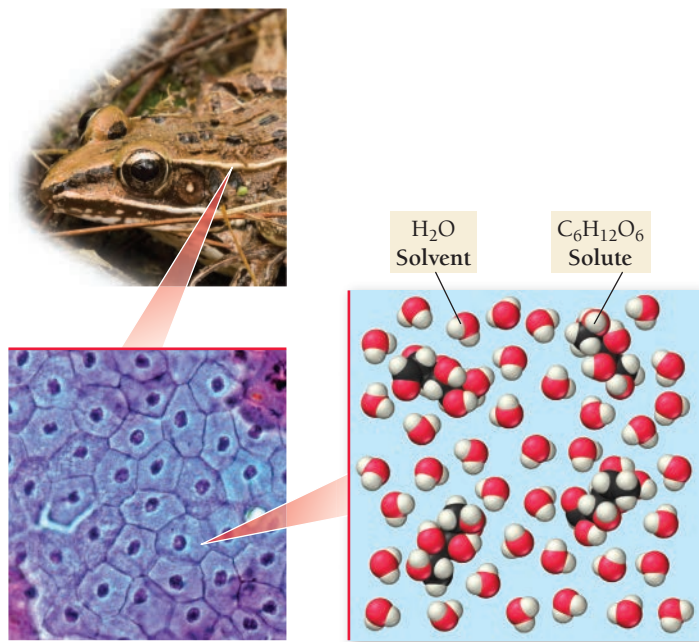
“One molecule of nonsaline substance (held in the solvent) dissolved in 100 molecules of any volatile liquid decreases the vapor pressure of this liquid by a nearly constant fraction, nearly 0.0105.”

—François-Marie Raoult (1830–1901)

13.1 Antifreeze in Frogs

The wood frog (*Rana sylvatica*) looks like most other frogs. It is a few inches long and has characteristic greenish-brown skin. At first glance, the wood frog seems quite unremarkable. But a wood frog survives cold winters in a remarkable way—it partially freezes. In its partially frozen state, a wood frog has no heartbeat, no blood circulation, no breath, and no brain activity. Within 1–2 hours of thawing, however, these vital functions restart, and the frog hops off to find food. How does the wood frog do this?

Most cold-blooded animals cannot survive freezing temperatures because the water within their cells freezes. As we learned in Section 11.8, when water freezes, it expands. When the water in cells freezes and expands, it irreversibly damages cells. To prevent this, the wood frog, before hibernating, secretes a large amount of glucose into its bloodstream. The glucose incorporates into the frog's cells, resulting in cells that are filled with a concentrated glucose solution. As we shall see in this chapter, concentrated solutions have a lower freezing point than the corresponding pure liquid. When the temperature drops below freezing, the frog's extracellular body fluids, such as those in its abdominal cavity, freeze solid. Fluids within the frog's cells, however, remain liquid because of the high glucose concentration. In other words, the



concentrated glucose solution within the frog's cells acts as antifreeze, preventing the water within the cells from freezing and allowing the frog to survive.

The concentrated glucose and water mixture within the wood frog's cells is a **solution**, a homogeneous mixture of two or more substances or components (**Figure 13.1**). The majority component in a solution is typically called the **solvent**, and the minority component is the **solute**. In a glucose solution, water is the solvent and glucose is the solute. Solutions form in part because of the intermolecular forces we discussed in Chapter 11. In most solutions, the particles of the solute interact with the particles of the solvent through intermolecular forces.

◀ **FIGURE 13.1 A Glucose Solution in a Wood Frog's Cells**
In a glucose solution, glucose ($C_6H_{12}O_6$) is the solute and water is the solvent.

13.2 Types of Solutions and Solubility

A solution may be composed of a solid and a liquid (such as the salt and water that are the primary components of seawater), but it may also be composed of a gas and a liquid, two different liquids, or other combinations (see Table 13.1). In **aqueous solutions**, water is the solvent, and a solid, liquid, or gas is the solute. For example, sugar water and saltwater are both aqueous solutions. Similarly, ethyl alcohol—the alcohol in alcoholic beverages—readily mixes with water to form a solution, and carbon dioxide dissolves in water to form the aqueous solution that we know as club soda.


You probably know from experience that a particular solvent, such as water, does not dissolve all possible solutes. For example, you cannot clean your greasy hands with just water because the water does not dissolve the grease. However, another solvent, such as paint thinner, can easily dissolve the grease. The grease is *insoluble* in water but *soluble* in the paint thinner. The **solubility** of a substance is the amount of the substance that will dissolve in a given amount of solvent. The solubility of sodium chloride in water at 25°C is 36 g NaCl per 100 g water, while the solubility of grease in water is nearly zero. The solubility of one substance in another depends both on nature's tendency toward mixing and on the types of intermolecular forces that we discussed in Chapter 11.

TABLE 13.1 Common Types of Solutions

Solution Phase	Solute Phase	Solvent Phase	Example
Gaseous solution	Gas	Gas	Air (mainly oxygen and nitrogen)
Liquid solution	Gas	Liquid	Club soda (CO_2 and water)
	Liquid	Liquid	Vodka (ethanol and water)
	Solid	Liquid	Seawater (salt and water)
Solid solution	Solid	Solid	Brass (copper and zinc) and other alloys

Nature's Tendency toward Mixing: Entropy

So far in this book, we have seen that many physical systems tend toward lower *potential energy*. For example, two particles with opposite charges (such as a proton and an electron or a cation and an anion) move toward each other because their potential energy decreases as their separation decreases according to Coulomb's law



▲ Club soda is a solution of carbon dioxide and water.

The general solubilities of a number of ionic compounds are described by the solubility rules in Section 8.4.

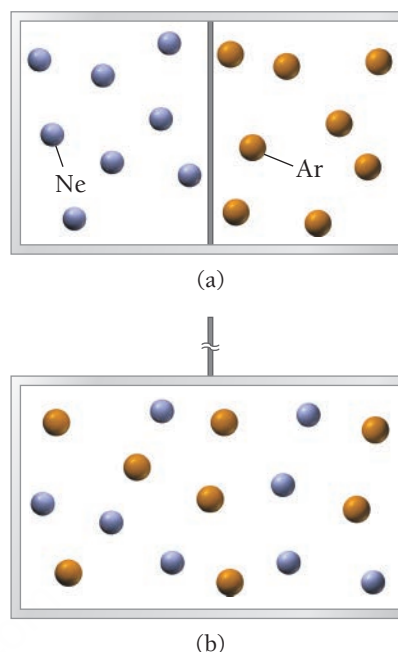
(see Section 3.3). The formation of a solution, however, *does not necessarily* lower the potential energy of its constituent particles.

The clearest example of this phenomenon is the formation of a homogeneous mixture (a *solution*) of two ideal gases. Suppose that we enclose neon and argon in a container with a removable barrier between them, as shown in **Figure 13.2(a)** ▶. As soon as we remove the barrier, the neon and argon mix together to form a solution, as shown in **Figure 13.2(b)** ▶. Why?

At low pressures and moderate temperatures, both neon and argon behave as ideal gases—they do not interact with each other in any way (that is, there are no significant intermolecular forces between their constituent particles). When the barrier is removed, the two gases mix, but their potential energy remains unchanged. In other words, *we cannot think of the mixing of two ideal gases as lowering their potential energy*. Rather, the tendency to mix is related to a concept called *entropy*.

Entropy is a measure of *energy randomization* or *energy dispersal* in a system. Recall that a gas at any temperature above 0 K has kinetic energy due to the motion of its atoms. When neon and argon are confined to their individual compartments, their kinetic energies are also confined to those compartments. When the barrier between the compartments is removed, each gas—along with its kinetic energy—becomes *spread out* or *dispersed* over a larger volume. Thus, the mixture of the two gases has greater energy dispersal, or greater *entropy*, than the separated components.

The pervasive tendency for energy to spread out, or disperse, whenever it is not restrained from doing so is the reason that two ideal gases mix. Another common example of the tendency toward energy dispersal is the transfer of thermal energy from hot to cold. If we heat one end of an iron rod, the thermal energy deposited at the end of the rod will spontaneously spread along the entire length of the rod. In similarity to the mixing of two ideal gases—where the kinetic energy of the particles becomes dispersed over a larger volume as the particles become dispersed—the thermal energy in the rod, initially concentrated in relatively fewer particles, becomes dispersed as it is distributed over a larger number of particles. The tendency for energy to disperse is why thermal energy flows from the hot end of the rod to the cold one, and not the other way around. Imagine a metal rod that became spontaneously hotter on one end and ice cold on the other. This does not happen because energy does not spontaneously concentrate itself. In Chapter 18, we will see that the dispersal of energy is actually the fundamental criterion that ultimately determines the spontaneity of any process.



Neon and argon are separated by a barrier.

When the barrier is removed, the gases spontaneously mix to form a uniform solution.

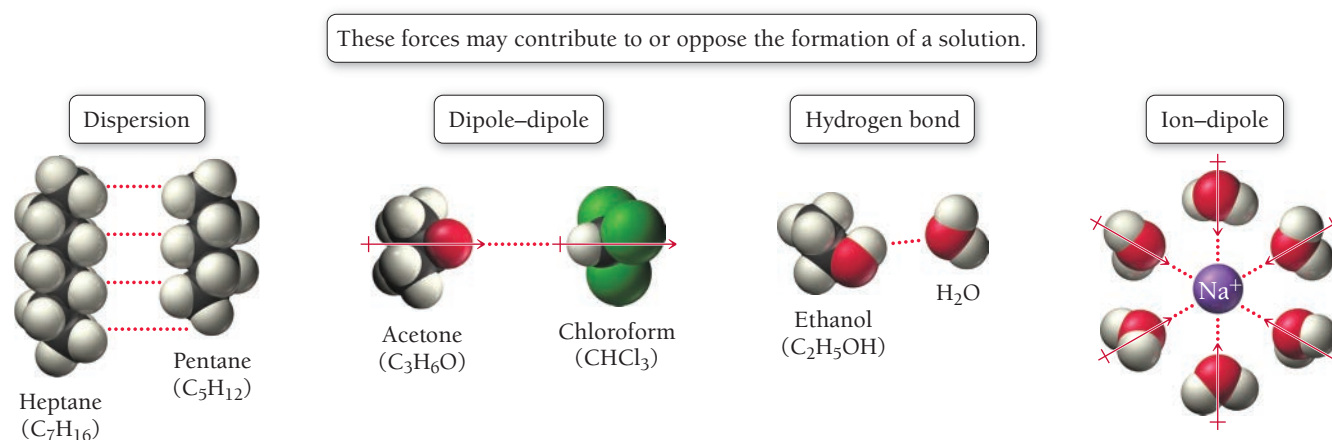
▲ **FIGURE 13.2** Spontaneous Mixing of Two Ideal Gases

The Effect of Intermolecular Forces

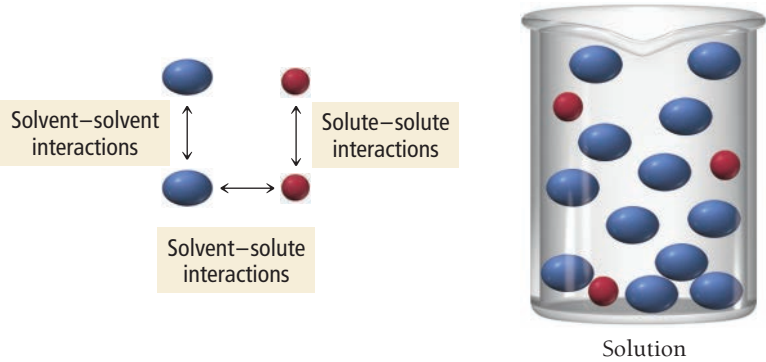
We have just seen that, in the absence of intermolecular forces, two substances spontaneously mix to form a homogeneous solution. We know from Chapter 11, however, that solids and liquids exhibit a number of different types of intermolecular forces, including dispersion forces, dipole–dipole forces, hydrogen bonding, and ion–dipole forces (**Figure 13.3** ▼). These forces, and the possible localized

Intermolecular Forces

▼ **FIGURE 13.3** Intermolecular Forces Involved in Solutions



Solution Interactions



▲ **FIGURE 13.4 Forces in a Solution** The relative strengths of these three interactions determine whether a solution will form.

structures that result from them, may promote the formation of a solution or prevent it, depending on the nature of the forces in the particular combination of solute and solvent.

Intermolecular forces exist between (a) the solvent and solute particles, (b) the solvent particles themselves, and (c) the solute particles themselves, as shown in **Figure 13.4** ◀. Each of the interactions is defined here:

- Solvent–solute interactions:* The interactions between a solvent particle and a solute particle.
- Solvent–solvent interactions:* The interactions between a solvent particle and another solvent particle.
- Solute–solute interactions:* The interactions between a solute particle and another solute particle.

TABLE 13.2 Relative Interactions and Solution Formation

Solvent–solute interactions	>	Solvent–solvent and solute–solute interactions	Solution generally forms.*
Solvent–solute interactions	=	Solvent–solvent and solute–solute interactions	Solution generally forms.*
Solvent–solute interactions	<	Solvent–solvent and solute–solute interactions	Solution may or may not form, depending on relative disparity.

*In some cases, especially solutions involving water, solvent structural changes that occur during solvation result in *decreases in entropy*, which may also prevent solution formation.

TABLE 13.3 Common Laboratory Solvents

Common Polar Solvents	Common Nonpolar Solvents
Water (H ₂ O)	Hexane (C ₆ H ₁₄)
Acetone (CH ₃ COCH ₃)	Diethyl ether (CH ₃ CH ₂ OCH ₂ CH ₃)*
Methanol (CH ₃ OH)	Toluene (C ₇ H ₈)
Ethanol (CH ₃ CH ₂ OH)	Carbon tetrachloride (CCl ₄)

*Diethyl ether has a small dipole moment and can be considered intermediate between polar and nonpolar.

As shown in Table 13.2, a solution generally forms if the solvent–solute interactions are comparable to, or stronger than, the solvent–solvent interactions and the solute–solute interactions. For example, consider the hydrocarbons pentane (C₅H₁₂) and heptane (C₇H₁₆). The intermolecular forces present within both pentane and heptane are dispersion forces. Similarly, the intermolecular forces present *between* heptane and pentane are also dispersion forces. All three interactions are of similar magnitude, so the two substances are soluble in each other in all proportions—they are said to be **miscible**. The formation of the solution is driven by the tendency toward mixing, or toward greater entropy, that we just discussed.

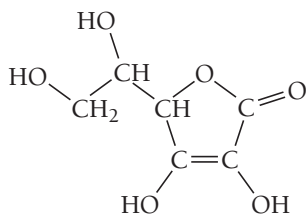
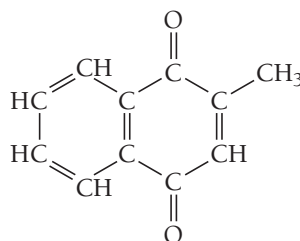
If solvent–solute interactions are weaker than solvent–solvent and solute–solute interactions—in other words, if solvent molecules and solute molecules each interact more strongly with molecules of their own kind than with molecules of the other kind—then a solution may still form, depending on the relative disparities between the interactions. If the disparity is small, the tendency to mix results in the formation of a solution even though the process is energetically uphill. If the disparity is large, however, a solution does not form.

In general, we can use the rule of thumb that *like dissolves like* when predicting the formation of solutions. Polar solvents, such as water, tend to dissolve many polar or ionic solutes, and nonpolar solvents, such as hexane, tend to dissolve many nonpolar solutes. Similar kinds of solvents dissolve similar kinds of solutes. Table 13.3 lists some common polar and nonpolar laboratory solvents.

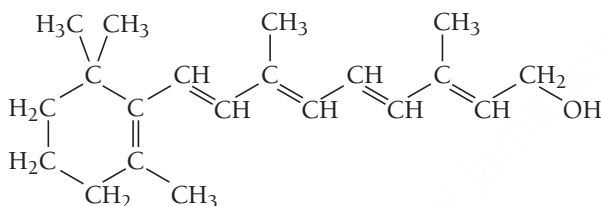
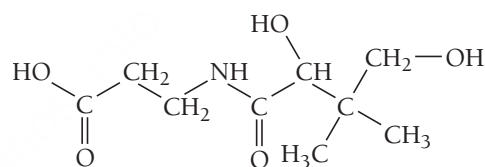
EXAMPLE 13.1**Solubility**

Vitamins are categorized as either fat soluble or water soluble. Water-soluble vitamins dissolve in body fluids and are easily eliminated in the urine, so there is little danger of overconsumption. Fat-soluble vitamins, on the other hand, can accumulate in the body's fatty deposits. Overconsumption of a fat-soluble vitamin can be dangerous. Examine the structure of each vitamin shown here and classify it as either fat soluble or water soluble.

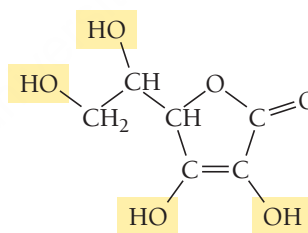
(a) Vitamin C

(b) Vitamin K₃

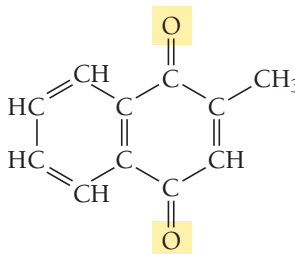
(c) Vitamin A

(d) Vitamin B₅**SOLUTION**

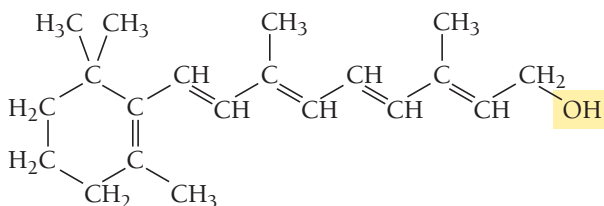
- (a) The four —OH bonds in vitamin C make it highly polar and allow it to hydrogen-bond with water. Vitamin C is water soluble.



- (b) The C—C bonds in vitamin K₃ are nonpolar, and the C—H bonds are nearly so. The C=O bonds are polar, but the bond dipoles oppose and largely cancel each other, so the molecule is dominated by the nonpolar bonds. Vitamin K₃ is fat soluble.



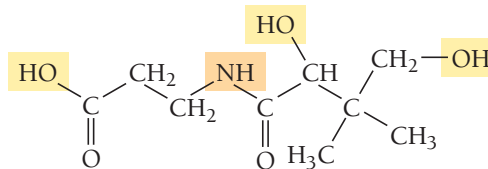
- (c) The C—C bonds in vitamin A are nonpolar, and the C—H bonds are nearly so. The one polar —OH bond may increase vitamin A's water solubility slightly, but overall it is nonpolar and therefore fat soluble.



—Continued on the next page

Continued from the previous page—

- (d) The three —OH bonds and one —NH bond in vitamin B₅ make it highly polar and allow it to hydrogen-bond with water. Vitamin B₅ is water soluble.

**FOR PRACTICE 13.1**

Determine whether each compound is soluble in hexane.

- (a) water (H₂O) (b) propane (CH₃CH₂CH₃)
 (c) ammonia (NH₃) (d) hydrogen chloride (HCl)


13.1
Cc

Conceptual Connection

Solubility

Examine the table listing the solubilities of several alcohols in water and in hexane. Explain the observed trend in terms of intermolecular forces.

Alcohol	Space-Filling Model	Solubility in H ₂ O (mol alcohol/100 g H ₂ O)	Solubility in Hexane (C ₆ H ₁₄) (mol alcohol/100 g C ₆ H ₁₄)
Methanol (CH ₃ OH)		Miscible	0.12
Ethanol (CH ₃ CH ₂ OH)		Miscible	Miscible
Propanol (CH ₃ CH ₂ CH ₂ OH)		Miscible	Miscible
Butanol (CH ₃ CH ₂ CH ₂ CH ₂ OH)		0.11	Miscible
Pentanol (CH ₃ CH ₂ CH ₂ CH ₂ CH ₂ OH)		0.030	Miscible

13.3 Energetics of Solution Formation

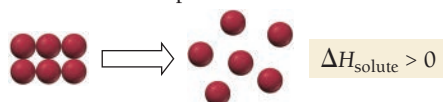
In Chapter 9, we examined the energy changes associated with chemical reactions. Similar energy changes can occur when a solution forms, depending on the magnitude of the interactions between the solute and solvent particles. For example, when we dissolve sodium hydroxide in water, heat is evolved—the solution process is *exothermic*. In contrast, when we dissolve ammonium nitrate (NH₄NO₃) in water,

heat is absorbed—the solution process is *endothermic*. Other solutions, such as sodium chloride in water, barely absorb or evolve heat upon formation. What causes these different behaviors?

Energy Changes in Solution Formation

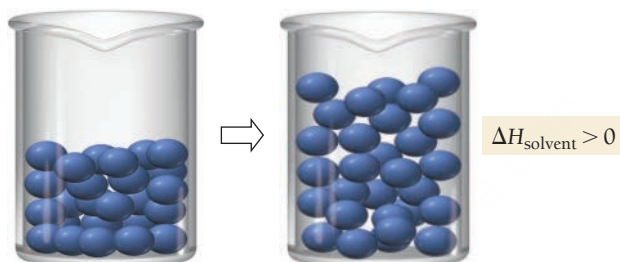
We can understand the energy changes associated with solution formation by envisioning the process as occurring in three steps, each with an associated change in enthalpy:

1. Separating the solute into its constituent particles.



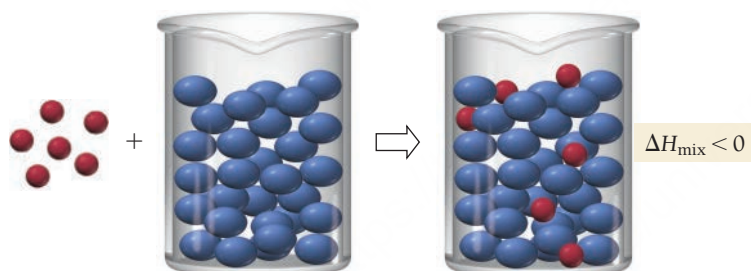
This step is always endothermic (positive ΔH) because energy is required to overcome the forces that hold the solute particles together.

2. Separating the solvent particles from each other to make room for the solute particles.



Like Step 1, this step is also endothermic because energy is required to overcome the intermolecular forces among the solvent particles.

3. Mixing the solute particles with the solvent particles.



This step is exothermic because energy is released as the solute particles interact (through intermolecular forces) with the solvent particles.

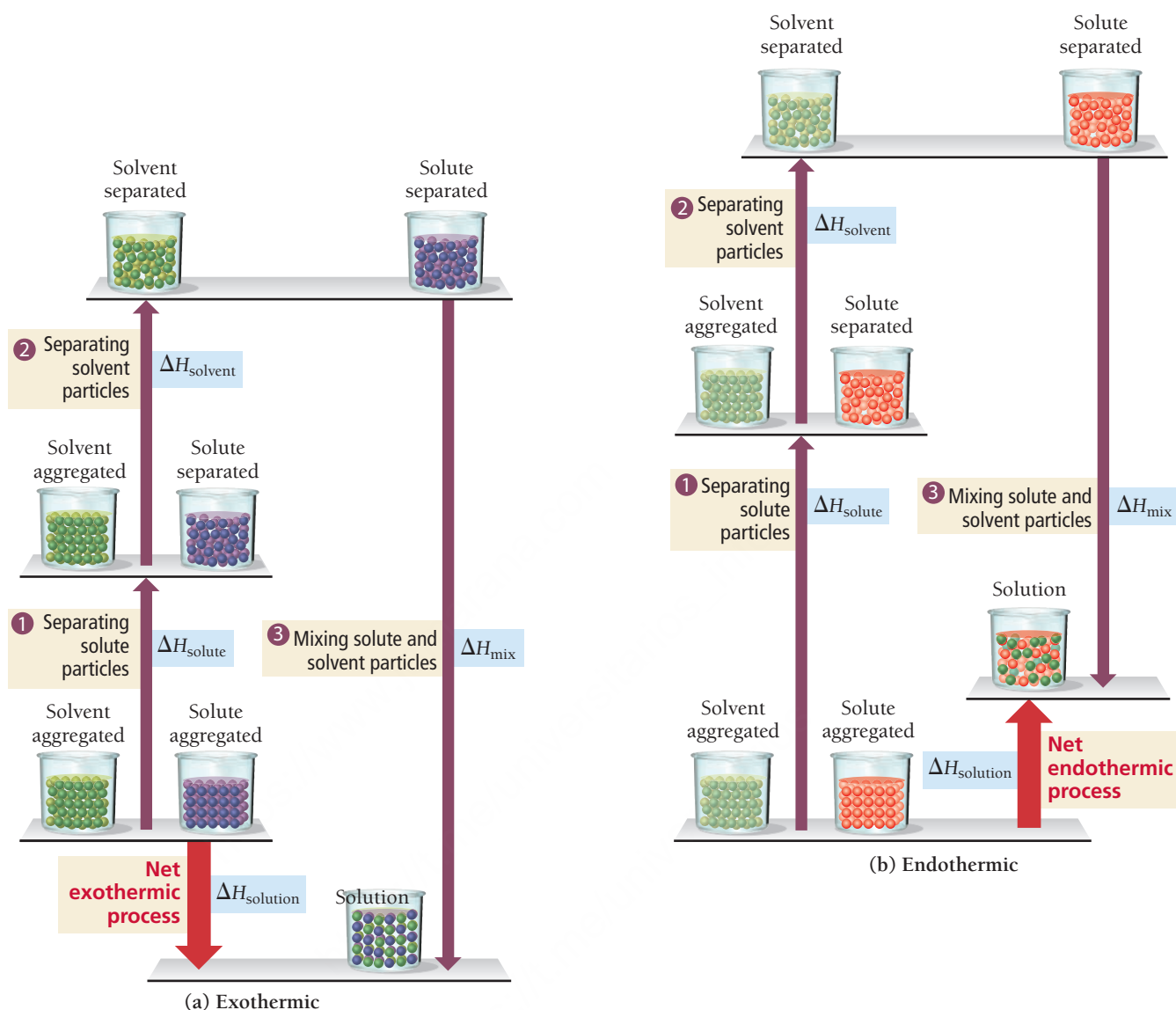
According to Hess's law, the overall enthalpy change upon solution formation, called the **enthalpy of solution (ΔH_{soln})**, is the sum of the changes in enthalpy for each step:

$$\Delta H_{\text{soln}} = \underset{\text{endothermic (+)}}{\Delta H_{\text{solute}}} + \underset{\text{endothermic (+)}}{\Delta H_{\text{solvent}}} + \underset{\text{exothermic (-)}}{\Delta H_{\text{mix}}}$$

Since the first two terms are endothermic (positive ΔH) and the third term is exothermic (negative ΔH), the overall sign of ΔH_{soln} depends on the magnitudes of the individual terms (**Figure 13.5** ► on the next page) as outlined here:

1. If the sum of the endothermic terms is approximately equal in magnitude to the exothermic term, then ΔH_{soln} is about zero. The entropy increase upon mixing drives the formation of a solution, while the overall energy of the system remains nearly constant.
2. If the sum of the endothermic terms is smaller in magnitude than the exothermic term, then ΔH_{soln} is negative and the solution process is exothermic. In this case, both the tendency toward lower energy and the tendency toward greater entropy drive the formation of a solution.
3. If the sum of the endothermic terms is greater in magnitude than the exothermic term, then ΔH_{soln} is positive and the solution process is endothermic. In this case, as long as ΔH_{soln} is not too large, the tendency toward greater entropy still drives the formation of a solution. If, on the other hand, ΔH_{soln} is too large, a solution does not form.

Energetics of Solution Formation



▲ FIGURE 13.5 Energetics of the Solution Process (a) When ΔH_{mix} is greater in magnitude than the sum of ΔH_{solute} and $\Delta H_{\text{solvent}}$, the heat of solution is negative (exothermic). (b) When ΔH_{mix} is smaller in magnitude than the sum of ΔH_{solute} and $\Delta H_{\text{solvent}}$, the heat of solution is positive (endothermic).

Aqueous Solutions and Heats of Hydration

Many common solutions, such as seawater, contain an ionic compound dissolved in water. For these aqueous solutions, we combine $\Delta H_{\text{solvent}}$ and ΔH_{mix} into a single term called the **heat of hydration** ($\Delta H_{\text{hydration}}$) (Figure 13.6 ▶). The heat of hydration is the enthalpy change that occurs when 1 mol of the gaseous solute ions is dissolved in water. Because the ion–dipole interactions that occur between a dissolved ion and the surrounding water molecules (Figure 13.7 ▶) are much stronger than the hydrogen bonds in water, $\Delta H_{\text{hydration}}$ is always large and negative (exothermic) for ionic compounds.

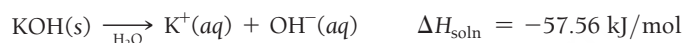
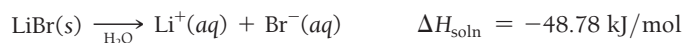
Using the heat of hydration, we can write the enthalpy of solution as a sum of just two terms, one endothermic and one exothermic:

$$\Delta H_{\text{soln}} = \Delta H_{\text{solute}} + \underbrace{\Delta H_{\text{solvent}} + \Delta H_{\text{mix}}}_{\Delta H_{\text{hydration}}}$$

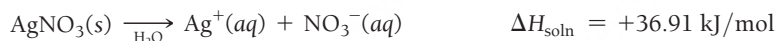
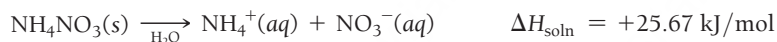
$$\Delta H_{\text{soln}} = \underbrace{\Delta H_{\text{solute}}}_{\text{endothermic (positive)}} + \underbrace{\Delta H_{\text{hydration}}}_{\text{exothermic (negative)}}$$

For ionic compounds, ΔH_{solute} , the energy required to separate the solute into its constituent particles is the negative of the solute's lattice energy ($\Delta H_{\text{solute}} = -\Delta H_{\text{lattice}}$) discussed in Section 9.11. For ionic aqueous solutions, then, the overall enthalpy of solution depends on the relative magnitudes of ΔH_{solute} and $\Delta H_{\text{hydration}}$ with three possible scenarios (in each case we refer to the *magnitude or absolute value* of ΔH):

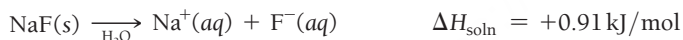
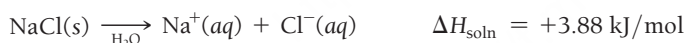
1. $|\Delta H_{\text{solute}}| < |\Delta H_{\text{hydration}}|$ The amount of energy required to separate the solute into its constituent ions is less than the energy given off when the ions are hydrated. ΔH_{soln} is therefore negative, and the solution process is exothermic. Solutes with negative enthalpies of solution include lithium bromide and potassium hydroxide. When these solutes dissolve in water, the resulting solutions feel warm to the touch:



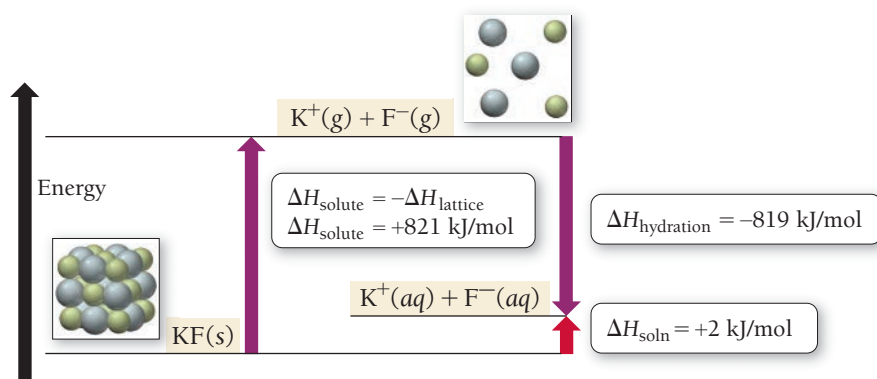
2. $|\Delta H_{\text{solute}}| > |\Delta H_{\text{hydration}}|$ The amount of energy required to separate the solute into its constituent ions is greater than the energy given off when the ions are hydrated. ΔH_{soln} is therefore positive, and the solution process is endothermic (if a solution forms at all). Solutes that form aqueous solutions with positive enthalpies of solution include ammonium nitrate and silver nitrate. When these solutes dissolve in water, the resulting solutions feel cool to the touch:



3. $|\Delta H_{\text{solute}}| \approx |\Delta H_{\text{hydration}}|$ The amount of energy required to separate the solute into its constituent ions is roughly equal to the energy given off when the ions are hydrated. ΔH_{soln} is therefore approximately zero, and the solution process is neither appreciably exothermic nor appreciably endothermic. Solutes with enthalpies of solution near zero include sodium chloride and sodium fluoride. When these solutes dissolve in water, the resulting solutions do not undergo a noticeable change in temperature:

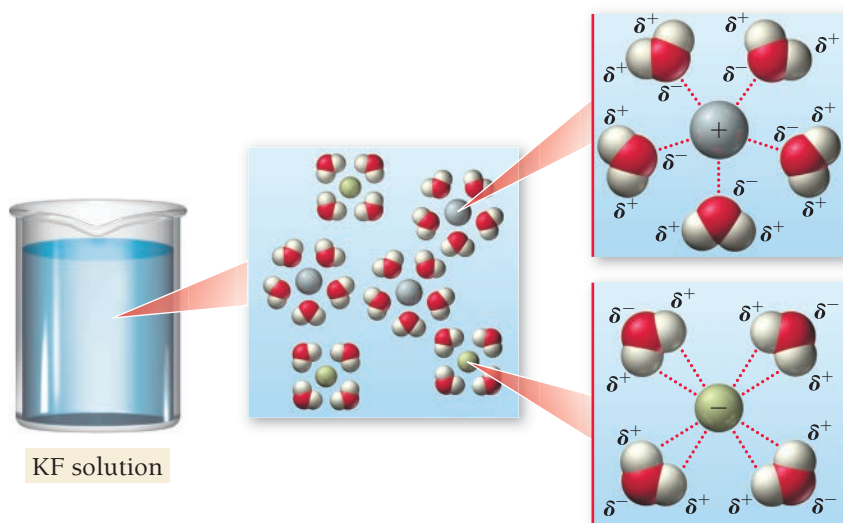


Heat of Hydration and Heat of Solution



▲ FIGURE 13.6 Heat of Hydration and Heat of Solution The heat of hydration is the heat emitted when 1 mol of gaseous solute ions is dissolved in water. The sum of the negative of the lattice energy and the heat of hydration is the heat of solution. (Recall that the negative of lattice energy is ΔH_{solute} .)

Ion–Dipole Interactions



◀ FIGURE 13.7 Ion–Dipole Interactions Ion–dipole interactions such as those between potassium ions, fluoride ions, and water molecules cause the heat of hydration to be largely negative (exothermic) for ionic compounds.



13.2

Cc

Conceptual
Connection

Energetics of Aqueous Solution Formation

The enthalpy of solution for cesium fluoride is -36.8 kJ/mol . What can you conclude about the relative magnitudes of ΔH_{solute} and $\Delta H_{\text{hydration}}$?



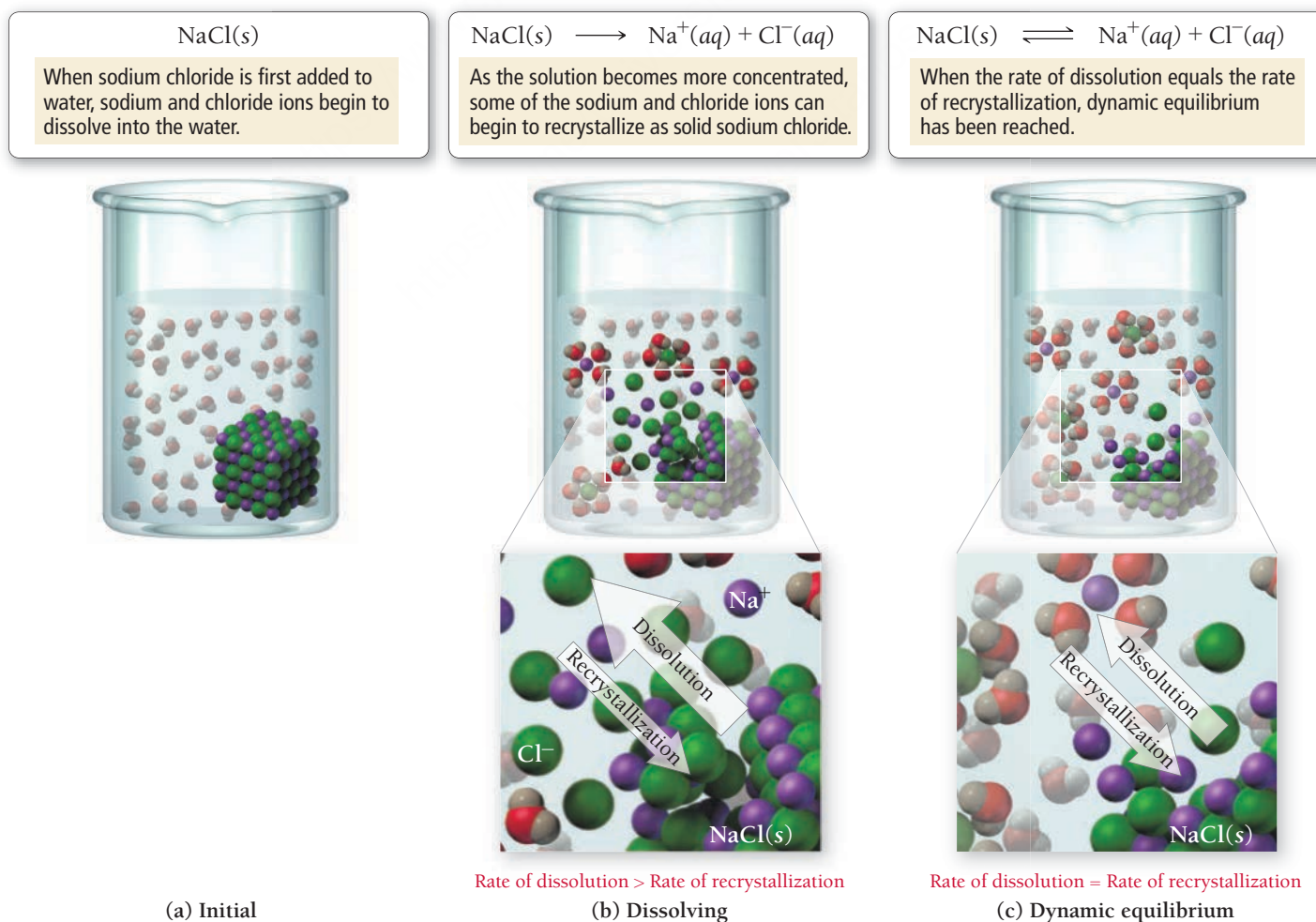
KEY CONCEPT VIDEO
**Solution Equilibrium and the
Factors Affecting Solubility**

13.4 Solution Equilibrium and Factors Affecting Solubility

The dissolution of a solute in a solvent is an equilibrium process similar to the equilibrium process associated with a state change (discussed in Chapter 11). Imagine, from a particulate viewpoint, the dissolution of a solid solute such as sodium chloride in a liquid solvent such as water (**Figure 13.8** ▼). Initially, water molecules rapidly solvate sodium cations and chloride anions, resulting in a noticeable decrease in the amount of solid sodium chloride in the water. Over time, however, the concentration of dissolved sodium chloride in the solution increases. This dissolved sodium chloride begins to recrystallize as solid sodium chloride. Initially, the rate of dissolution far exceeds the rate of recrystallization, but

▼ **FIGURE 13.8** Dissolution of **NaCl** (a) Initial addition of NaCl, (b) Dissolution, (c) Dynamic equilibrium.

Solution Equilibrium





◀ **FIGURE 13.9 Precipitation from a Supersaturated Solution** When a small piece of solid sodium acetate is added to a supersaturated sodium acetate solution, the excess solid precipitates out of the solution.

as the concentration of dissolved sodium chloride increases, the rate of recrystallization also increases. Eventually, the rates of dissolution and recrystallization become equal—**dynamic equilibrium** has been reached:



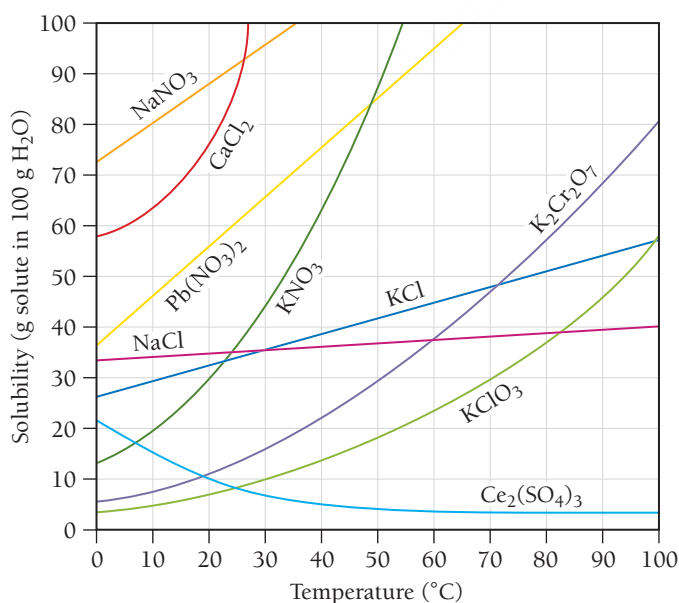
A solution in which the dissolved solute is in dynamic equilibrium with the solid (undissolved) solute is a **saturated solution**. *If we add additional solute to a saturated solution, the solution concentration will not increase any further.* A solution containing less than the equilibrium amount of solute is an **unsaturated solution**. *If we add additional solute to an unsaturated solution, the solution concentration increases.*

Under certain circumstances, a **supersaturated solution**—one containing more than the equilibrium amount of solute—may form. Supersaturated solutions are unstable, and the excess solute normally precipitates out of the solution. However, in some cases, if left undisturbed, a supersaturated solution can exist for an extended period of time. For example, in a common classroom demonstration, a tiny piece of solid sodium acetate is added to a supersaturated solution of sodium acetate. This triggers the precipitation of the solute, which crystallizes out of solution in a dramatic and often beautiful way (**Figure 13.9** ▲).

The Effect of Temperature on the Solubility of Solids

The solubility of solids in water can be highly dependent on temperature. Have you ever noticed how much more sugar you can dissolve in hot tea than in cold tea? Although exceptions exist, *the solubility of most solids in water increases with increasing temperature*, as shown in **Figure 13.10** ▼. For example, the solubility of potassium nitrate (KNO_3) at room temperature is about 37 g KNO_3 per 100 g of water. At 50°C , the solubility rises to 88 g KNO_3 per 100 g of water.

In the case of sugar dissolving in water, the higher temperature increases both *how fast* the sugar dissolves and *how much* sugar dissolves.



◀ **FIGURE 13.10 Solubility and Temperature** The solubility of most solids increases with increasing temperature.



▲ Rock candy is formed by the recrystallization of sugar.



Cold soda pop

Warm soda pop

▲ Warm soda pop bubbles more than cold soda pop because carbon dioxide is less soluble in the warm solution.

A common way to purify a solid is **recrystallization**. In this technique, enough solid is added to water (or some other solvent) to create a saturated solution at an elevated temperature. As the solution cools, it becomes supersaturated and the excess solid precipitates out of the solution. If the solution cools slowly, the solid forms crystals as it comes out of solution. The crystalline structure tends to exclude impurities, resulting in a purer solid.


You can use the temperature dependence of the solubility of solids to make rock candy. Prepare a saturated sucrose (table sugar) solution at an elevated temperature, and allow a string or stick to dangle into the solution for several days. As the solution cools and the solvent evaporates, the solution becomes supersaturated and sugar crystals grow on the string or stick. After several days, beautiful edible crystals or “rocks” of sugar cover the string.

Factors Affecting the Solubility of Gases in Water

Solutions of gases dissolved in water are common. Club soda, for example, is a solution of carbon dioxide and water, and most liquids exposed to air contain dissolved gases. Fish depend on the oxygen dissolved in lake or ocean water for life, and blood contains dissolved nitrogen, oxygen, and carbon dioxide. Even tap water contains dissolved gases. The solubility of a gas in a liquid is affected by both temperature and pressure.

The Effect of Temperature We can observe the effect of temperature on the solubility of a gas in water when we heat ordinary tap water on a stove. Before the water reaches its boiling point, small bubbles develop in the water. These bubbles are the dissolved air (mostly nitrogen and oxygen) coming out of solution. (Once the water boils, the bubbling becomes more vigorous—these larger bubbles are composed of water vapor.) The dissolved air comes out of the heated solution because—unlike solids, whose solubility generally increases with increasing temperature—the *solubility of gases in liquids decreases with increasing temperature*.

The inverse relationship between gas solubility and temperature is the reason that warm soda pop bubbles more than cold soda pop when you open it and warm beer goes flat faster than cold beer. More carbon dioxide comes out of these solutions at room temperature than at a lower temperature because the gas is less soluble at room temperature. The decreasing solubility of gases with increasing temperature is also the reason that fish don’t bite much in a warm lake. The warm temperature results in a lower oxygen concentration. With lower oxygen levels, the fish become lethargic and do not strike as aggressively at the lure or bait you cast their way.



13.3 Cc

Conceptual Connection

Solubility and Temperature

A solution is saturated in both nitrogen gas and potassium bromide at 75°C. When the solution is cooled to room temperature, what is most likely to happen?

- Some nitrogen gas bubbles out of solution.
- Some potassium bromide precipitates out of solution.
- Some nitrogen gas bubbles out of solution, *and* some potassium bromide precipitates out of solution.
- Nothing happens.

The Effect of Pressure The solubility of gases also depends on pressure. The higher the pressure of a gas above a liquid, the more soluble the gas is in the liquid. In a sealed can of soda pop, for example, the carbon dioxide is maintained in solution by the high pressure of carbon dioxide within the can. When the can is opened, this pressure is released and the solubility of carbon dioxide decreases, resulting in bubbling (**Figure 13.11** ►).

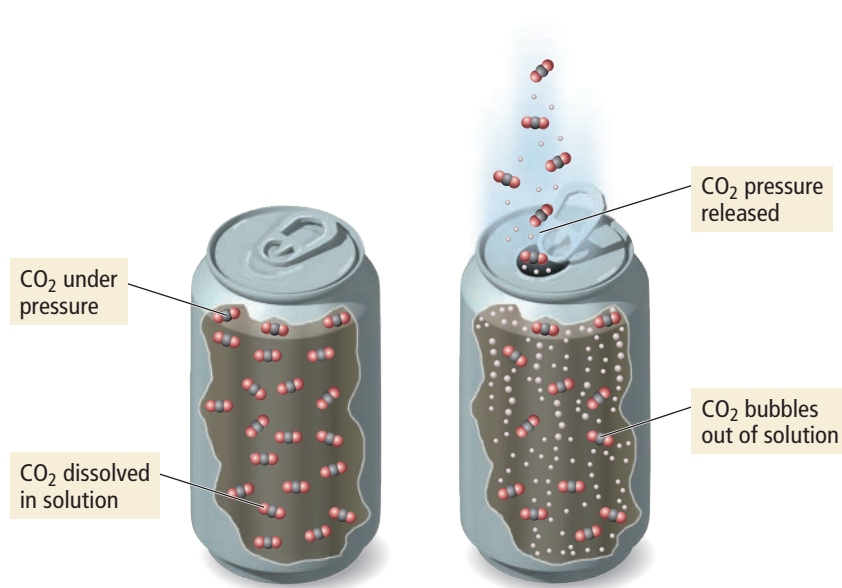
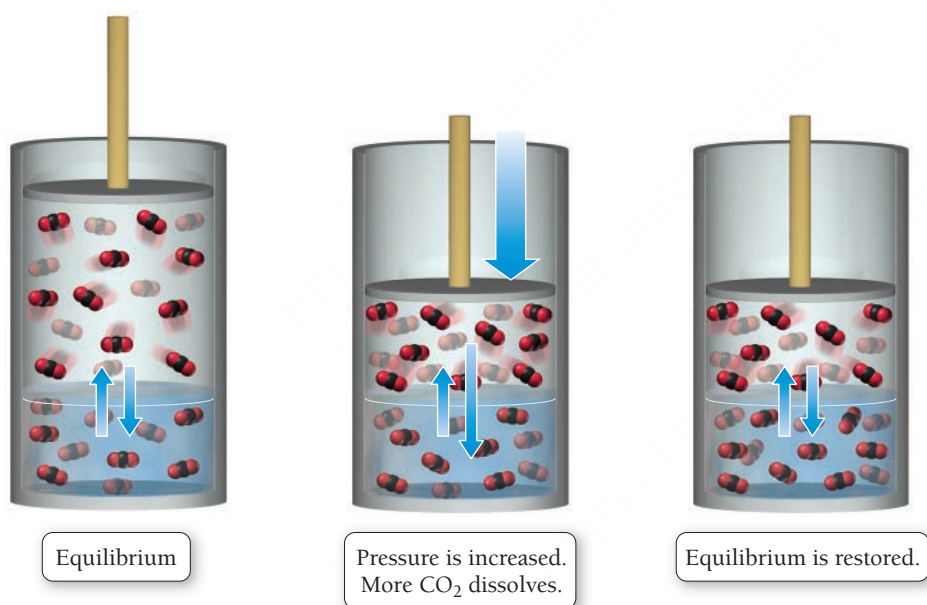


FIGURE 13.11 Soda Fizz The bubbling that occurs when a can of soda is opened results from the reduced pressure of carbon dioxide over the liquid. At lower pressure, the carbon dioxide is less soluble and bubbles out of solution.

We can better understand the increased solubility of a gas in a liquid by considering cylinders containing water and carbon dioxide gas.



The first cylinder represents an equilibrium between gaseous and dissolved carbon dioxide—the rate of carbon dioxide molecules entering solution exactly equals the rate of molecules leaving the solution. Now imagine we decrease the volume, as shown in the second cylinder. The pressure of carbon dioxide increases, causing the rate of molecules entering the solution (represented by the longer arrow on the right) to rise. The number of molecules in solution increases until equilibrium is established again, as shown in the third cylinder. However, the amount of carbon dioxide in solution is now greater.

We can quantify the solubility of gases with increasing pressure with **Henry's law**:

$$S_{\text{gas}} = k_{\text{H}}P_{\text{gas}}$$

where S_{gas} is the solubility of the gas (usually in M), k_{H} is a constant of proportionality (called the *Henry's law constant*) that depends on the specific solute and solvent and also on temperature, and P_{gas} is the partial pressure of the gas (usually in atm). The equation shows that the solubility of a gas in a liquid is directly proportional to the pressure of the gas above the liquid. Table 13.4 lists the Henry's law constants for several common gases.

TABLE 13.4 Henry's Law Constants for Several Gases in Water at 25 °C

Gas	k_{H} (M/atm)
O ₂	1.3×10^{-3}
N ₂	6.1×10^{-4}
CO ₂	3.4×10^{-2}
NH ₃	5.8×10^1
He	3.7×10^{-4}



13.4
Cc

Conceptual
Connection

Henry's Law

Examine the Henry's law constants in Table 13.4. Why is the constant for ammonia larger than the others?

EXAMPLE 13.2

Henry's Law

What pressure of carbon dioxide is required to maintain the carbon dioxide concentration in a bottle of club soda at 0.12 M at 25°C?

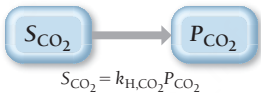
SORT You are given the desired solubility of carbon dioxide and asked to find the pressure required to achieve this solubility.

GIVEN: $S_{\text{CO}_2} = 0.12 \text{ M}$

FIND: P_{CO_2}

STRATEGIZE Use Henry's law to find the required pressure from the solubility. Use the Henry's law constant for carbon dioxide listed in Table 13.4.

CONCEPTUAL PLAN



RELATIONSHIPS USED

$S_{\text{gas}} = k_{\text{H}} P_{\text{gas}}$ (Henry's law)

$k_{\text{H,CO}_2} = 3.4 \times 10^{-2} \text{ M/atm}$ (from Table 13.4)

SOLVE Solve the Henry's law equation for P_{CO_2} and substitute the other quantities to calculate it.

SOLUTION

$$\begin{aligned} S_{\text{CO}_2} &= k_{\text{H,CO}_2} P_{\text{CO}_2} \\ P_{\text{CO}_2} &= \frac{S_{\text{CO}_2}}{k_{\text{H,CO}_2}} \\ &= \frac{0.12 \text{ M}}{3.4 \times 10^{-2} \frac{\text{M}}{\text{atm}}} \\ &= 3.5 \text{ atm} \end{aligned}$$

CHECK The answer is in the correct units and seems reasonable. A small answer (for example, less than 1 atm) would be suspect because you know that the soda is under a pressure greater than atmospheric pressure when you open it. A very large answer (for example, over 100 atm) would be suspect because an ordinary can or bottle probably could not sustain such high pressures without bursting.

FOR PRACTICE 13.2

Determine the solubility of oxygen in water at 25°C exposed to air at 1.0 atm. Assume a partial pressure for oxygen of 0.21 atm.



KEY CONCEPT VIDEO
Solution Concentration:
Molarity, Molality, Parts
by Mass and Volume, Mole
Fraction

13.5 Expressing Solution Concentration

The amount of solute in a solution is an important property of the solution. A **dilute solution** contains small quantities of solute relative to the amount of solvent. A **concentrated solution** contains large quantities of solute relative to the amount of solvent. Common ways of reporting solution concentration include molarity, molality, parts by mass, parts by volume, mole fraction, and mole percent, as summarized in Table 13.5. We have seen two of these units before: molarity in Section 8.2 and mole fraction in Section 10.7. In this section of the chapter, we review the terms we have already covered and introduce the new ones.

TABLE 13.5 Solution Concentration Terms

Unit	Definition	Units
molarity (M)	$\frac{\text{amount solute (in mol)}}{\text{volume solution (in L)}}$	$\frac{\text{mol}}{\text{L}}$
molality (m)	$\frac{\text{amount solute (in mol)}}{\text{mass solvent (in kg)}}$	$\frac{\text{mol}}{\text{kg}}$
mole fraction (χ)	$\frac{\text{amount solute (in mol)}}{\text{total amount of solute and solvent (in mol)}}$	None
mole percent (mol %)	$\frac{\text{amount solute (in mol)}}{\text{total amount of solute and solvent (in mol)}} \times 100\%$	%
parts by mass	$\frac{\text{mass solute}}{\text{mass solution}} \times \text{multiplication factor}$	
percent by mass (%)	$\text{multiplication factor} = 100$	%
parts per million by mass (ppm)	$\text{multiplication factor} = 10^6$	ppm
parts per billion by mass (ppb)	$\text{multiplication factor} = 10^9$	ppb
parts by volume (%, ppm, ppb)	$\frac{\text{volume solute}}{\text{volume solution}} \times \text{multiplication factor}^*$	

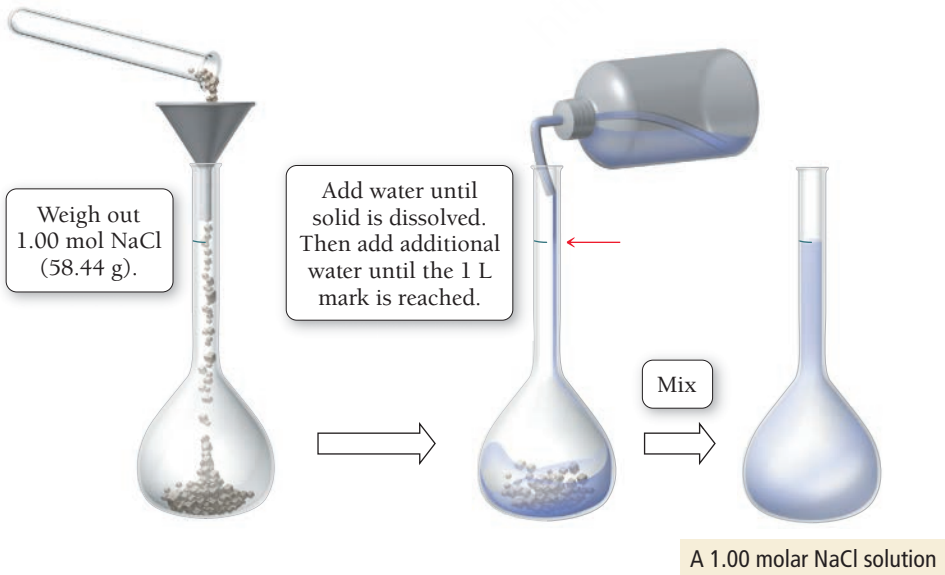
*Multiplication factors for parts by volume are identical to those for parts by mass.

Molarity

The **molarity (M)** of a solution is the amount of solute (in moles) divided by the volume of solution (in liters):

$$\text{molarity (M)} = \frac{\text{amount solute (in mol)}}{\text{volume solution (in L)}}$$

Note that molarity is moles of solute per liter of *solution*, not per liter of solvent. To make a solution of a specified molarity, we usually put the solute into a flask and then add water (or another solvent) to the desired volume of solution, as shown in **Figure 13.12** ▼. Molarity is a convenient unit to use when making, diluting, and transferring solutions because it specifies the amount of solute per unit of solution.



◀ **FIGURE 13.12 Preparing a Solution of Known Concentration** To make a 1-M NaCl solution, we add 1 mol of the solid to a flask and dilute with water to make 1 L of solution.

Molarity depends on volume, and because volume varies with temperature, molarity also varies with temperature. For example, a 1-M aqueous solution at room temperature is slightly less than 1 M at an elevated temperature because the volume of the solution is greater at the elevated temperature.

Molality

A concentration unit that is independent of temperature is **molality** (*m*), the amount of solute (in moles) divided by the mass of solvent (in kilograms):

$$\text{molality } (m) = \frac{\text{amount solute (in mol)}}{\text{mass solvent (in kg)}}$$

Notice that we define molality with respect to kilograms *solvent*, not kilograms *solution*. Molality is particularly useful when we need to compare concentrations over a range of different temperatures.

Molality is abbreviated with a lowercase italic *m*, while molarity is abbreviated with a capital M.



13.5
Cc

Conceptual
Connection

Molality

If you combine 25.0 g of a solute that has a mass of 25.0 g/mol with 100.0 g of a solvent, what is the molality of the resulting solution?

Parts by Mass and Parts by Volume

It is often convenient to report a concentration as a ratio of masses. A **parts by mass** concentration is the ratio of the mass of the solute to the mass of the solution, all multiplied by a multiplication factor:

$$\frac{\text{mass solute}}{\text{mass solution}} \times \text{multiplication factor}$$

The particular parts by mass unit we use, which determines the size of the multiplication factor, depends on the concentration of the solution. For example, for **percent by mass** the multiplication factor is 100:

$$\text{percent by mass} = \frac{\text{mass solute}}{\text{mass solution}} \times 100$$

Percent means *per hundred*; a solution with a concentration of 14% by mass contains 14 g of solute per 100 g of solution.

For more dilute solutions, we can use **parts per million (ppm)**, which has a multiplication factor of 10^6 , or **parts per billion (ppb)**, which has a multiplication factor of 10^9 :

$$\text{ppm} = \frac{\text{mass solute}}{\text{mass solution}} \times 10^6$$

$$\text{ppb} = \frac{\text{mass solute}}{\text{mass solution}} \times 10^9$$

A solution with a concentration of 15 ppm by mass, for example, contains 15 g of solute per 10^6 g of solution.

Sometimes, we report concentrations as a ratio of volumes, especially for solutions in which both the solute and solvent are liquids. A **parts by volume** concentration is usually the ratio of the volume of the solute to the volume of the solution, all multiplied by a multiplication factor:

$$\frac{\text{volume solute}}{\text{volume solution}} \times \text{multiplication factor}$$

The multiplication factors are identical to those just described for parts by mass concentrations. For example, a 22% ethanol solution by volume contains 22 mL of ethanol for every 100 mL of solution.

We can use the parts by mass (or parts by volume) concentration of a solution as a conversion factor between mass (or volume) of the solute and mass (or volume) of the solution. For example, for a solution containing 3.5% sodium chloride by mass, we write the following conversion factor:

$$\frac{3.5 \text{ g NaCl}}{100 \text{ g solution}} \quad \text{converts} \quad \boxed{\text{g solution}} \longrightarrow \boxed{\text{g NaCl}}$$

For dilute aqueous solutions near room temperature, the units of ppm are equivalent to milligrams solute/per liter of solution. This is because the density of a dilute aqueous solution near room temperature is 1.0 g/mL, so that 1 L has a mass of 1000 g.

This conversion factor converts from grams solution to grams NaCl. To convert the other way, we invert the conversion factor:

$\frac{100 \text{ g solution}}{3.5 \text{ g NaCl}}$

converts

g NaCl

→

g solution

EXAMPLE 13.3

Using Parts by Mass in Calculations

Interactive
Worked Example
Video 13.3

PEARSON
eText
2.0

What volume (in mL) of a soft drink that is 10.5% sucrose ($C_{12}H_{22}O_{11}$) by mass contains 78.5 g of sucrose? (The density of the solution is 1.04 g/mL.)

<p>SORT You are given a mass of sucrose and the concentration and density of a sucrose solution, and you are asked to find the volume of solution containing the given mass.</p>	<p>GIVEN: 78.5 g $C_{12}H_{22}O_{11}$ 10.5% $C_{12}H_{22}O_{11}$ by mass density = 1.04 g/mL</p> <p>FIND: mL</p>
<p>STRATEGIZE Begin with the mass of sucrose in grams. Use the mass percent concentration of the solution (written as a ratio, as shown under relationships used) to find the number of grams of solution containing this quantity of sucrose. Then use the density of the solution to convert grams to milliliters of solution.</p>	<p>CONCEPTUAL PLAN</p> <div><div>g $C_{12}H_{22}O_{11}$</div><div>→</div><div>g soln</div><div>→</div><div>mL soln</div><div>$\frac{100 \text{ g soln}}{10.5 \text{ g } C_{12}H_{22}O_{11}}$</div><div>$\frac{1 \text{ mL}}{1.04 \text{ g}}$</div></div> <p>RELATIONSHIPS USED</p> <p>$\frac{10.5 \text{ g } C_{12}H_{22}O_{11}}{100 \text{ g soln}}$ (percent by mass written as ratio)</p> <p>$\frac{1 \text{ mL}}{1.04 \text{ g}}$ (given density of the solution)</p>
<p>SOLVE Begin with 78.5 g $C_{12}H_{22}O_{11}$ and multiply by the conversion factors to arrive at the volume of solution.</p>	<p>SOLUTION</p> $78.5 \text{ g } C_{12}H_{22}O_{11} \times \frac{100 \text{ g soln}}{10.5 \text{ g } C_{12}H_{22}O_{11}} \times \frac{1 \text{ mL}}{1.04 \text{ g}} = 719 \text{ mL soln}$
<p>CHECK The units of the answer are correct. The magnitude seems correct because the solution is approximately 10% sucrose by mass. As the density of the solution is approximately 1 g/mL, the volume containing 78.5 g sucrose should be roughly 10 times larger, as calculated ($719 \approx 10 \times 78.5$).</p>	
<p>FOR PRACTICE 13.3</p> <p>What mass of sucrose ($C_{12}H_{22}O_{11}$), in g, is in 355 mL (12 fl oz) of a soft drink that is 11.5% sucrose by mass? (Assume a density of 1.04 g/mL.)</p>	
<p>FOR MORE PRACTICE 13.3</p> <p>A water sample contains the pollutant chlorobenzene with a concentration of 15 ppb (by mass). What volume of this water contains 5.00×10^2 mg of chlorobenzene? (Assume a density of 1.00 g/mL.)</p>	

Mole Fraction and Mole Percent

For some applications, especially those in which the ratio of solute to solvent can vary widely, the most useful way to express concentration is the amount of solute (in moles) divided by the total amount of solute and solvent (in moles). This ratio is the **mole fraction** (χ_{solute}):

$$\chi_{\text{solute}} = \frac{\text{amount solute (in mol)}}{\text{total amount of solute and solvent (in mol)}} = \frac{n_{\text{solute}}}{n_{\text{solute}} + n_{\text{solvent}}}$$

The mole fraction can also be defined for the solvent:

$$\chi_{\text{solvent}} = \frac{n_{\text{solvent}}}{n_{\text{solute}} + n_{\text{solvent}}}$$

Also in common use is the **mole percent (mol %)**, which is the mole fraction \times one hundred percent:

$$\text{mol \%} = \chi_{\text{solute}} \times 100\%$$

EXAMPLE 13.4

Interactive
Worked Example
Video 13.4

PEARSON
eText
2.0

Calculating Concentrations

You prepare a solution by dissolving 17.2 g of ethylene glycol ($\text{C}_2\text{H}_6\text{O}_2$) in 0.500 kg of water.
The final volume of the solution is 515 mL. For this solution, calculate the concentration in each unit.

- (a) molarity
- (b) molality
- (c) percent by mass
- (d) mole fraction
- (e) mole percent

SOLUTION

<div>(a) To calculate molarity, first find the amount of ethylene glycol in moles from the mass and molar mass. Divide the amount in moles by the volume of the solution in liters.</div>	<div>$\text{mol C}_2\text{H}_6\text{O}_2 = 17.2 \text{ g C}_2\text{H}_6\text{O}_2 \times \frac{1 \text{ mol C}_2\text{H}_6\text{O}_2}{62.07 \text{ g C}_2\text{H}_6\text{O}_2} = 0.2771 \text{ mol C}_2\text{H}_6\text{O}_2$$\text{molarity (M)} = \frac{\text{amount solute (in mol)}}{\text{volume solution (in L)}}$$= \frac{0.2771 \text{ mol C}_2\text{H}_6\text{O}_2}{0.515 \text{ L solution}}$$= 0.538 \text{ M}$</div>
<div>(b) To calculate molality, use the amount of ethylene glycol in moles from (a), and divide by the mass of the water in kilograms.</div>	<div>$\text{molality (m)} = \frac{\text{amount solute (in mol)}}{\text{mass solvent (in kg)}}$$= \frac{0.2771 \text{ mol C}_2\text{H}_6\text{O}_2}{0.500 \text{ kg H}_2\text{O}}$$= 0.554 \text{ m}$</div>
<div>(c) To calculate percent by mass, divide the mass of the solute by the sum of the masses of the solute and solvent and multiply the ratio by 100%.</div>	<div>$\text{percent by mass} = \frac{\text{mass solute}}{\text{mass solution}} \times 100\%$$= \frac{17.2 \text{ g}}{17.2 \text{ g} + 5.00 \times 10^2 \text{ g}} \times 100\%$$= 3.33\%$</div>
<div>(d) To calculate mole fraction, first determine the amount of water in moles from the mass of water and its molar mass. Divide the amount of ethylene glycol in moles from (a) by the total number of moles.</div>	<div>$\text{mol H}_2\text{O} = 5.00 \times 10^2 \text{ g H}_2\text{O} \times \frac{1 \text{ mol H}_2\text{O}}{18.02 \text{ g H}_2\text{O}} = 27.75 \text{ mol H}_2\text{O}$$\chi_{\text{solute}} = \frac{n_{\text{solute}}}{n_{\text{solute}} + n_{\text{solvent}}}$$= \frac{0.2771 \text{ mol}}{0.2771 \text{ mol} + 27.75 \text{ mol}}$$= 9.89 \times 10^{-3}$</div>
<div>(e) To calculate mole percent, multiply the mole fraction from (d) by 100%.</div>	<div>$\text{mol \%} = \chi_{\text{solute}} \times 100\%$$= 0.989\%$</div>

FOR PRACTICE 13.4

You prepare a solution by dissolving 50.4 g sucrose ($\text{C}_{12}\text{H}_{22}\text{O}_{11}$) in 0.332 kg of water. The final volume of the solution is 355 mL. Calculate the concentration of the solution in each unit.

- (a) molarity
- (b) molality
- (c) percent by mass
- (d) mole fraction
- (e) mole percent

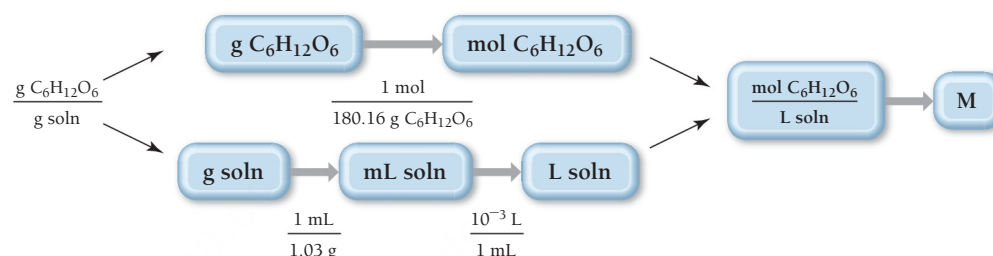
EXAMPLE 13.5**Converting between Concentration Units**Interactive
Worked Example
Video 13.5PEARSON
eText
2.0

What is the molarity of a 6.56% by mass glucose ($\text{C}_6\text{H}_{12}\text{O}_6$) solution? (The density of the solution is 1.03 g/mL.)

SORT You are given the concentration of a glucose solution in percent by mass and the density of the solution. Find the concentration of the solution in molarity.

GIVEN: 6.56% $\text{C}_6\text{H}_{12}\text{O}_6$
density = 1.03 g/mL
FIND: M

STRATEGIZE Begin with the mass percent concentration of the solution written as a ratio, and separate the numerator from the denominator. Convert the numerator from g $\text{C}_6\text{H}_{12}\text{O}_6$ to mol $\text{C}_6\text{H}_{12}\text{O}_6$. Convert the denominator from g soln to mL of solution and then to L solution. Divide the numerator (now in mol) by the denominator (now in L) to obtain molarity.

CONCEPTUAL PLAN**RELATIONSHIPS USED**

$$\frac{6.56 \text{ g C}_6\text{H}_{12}\text{O}_6}{100 \text{ g soln}} \text{ (percent by mass written as ratio)}$$

$$\frac{1 \text{ mol}}{180.16 \text{ g C}_6\text{H}_{12}\text{O}_6} \text{ (from molar mass of glucose)}$$

$$\frac{1 \text{ mL}}{1.03 \text{ g}} \text{ (from given density of the solution)}$$

SOLVE Begin with the numerator (6.56 g $\text{C}_6\text{H}_{12}\text{O}_6$) and use the molar mass to convert to mol $\text{C}_6\text{H}_{12}\text{O}_6$.

Convert the denominator (100 g solution) into mL of solution (using the density) and then to L of solution. Finally, divide mol $\text{C}_6\text{H}_{12}\text{O}_6$ by L solution to arrive at molarity.

SOLUTION

$$6.56 \text{ g C}_6\text{H}_{12}\text{O}_6 \times \frac{1 \text{ mol C}_6\text{H}_{12}\text{O}_6}{180.16 \text{ g C}_6\text{H}_{12}\text{O}_6} = 0.036412 \text{ mol C}_6\text{H}_{12}\text{O}_6$$

$$100 \text{ g soln} \times \frac{1 \text{ mL}}{1.03 \text{ g}} \times \frac{10^{-3} \text{ L}}{1 \text{ mL}} = 0.097087 \text{ L soln}$$

$$\frac{0.036412 \text{ mol C}_6\text{H}_{12}\text{O}_6}{0.097087 \text{ L soln}} = 0.375 \text{ M C}_6\text{H}_{12}\text{O}_6$$

CHECK The units of the answer are correct. The magnitude seems correct. Very high molarities (especially those above 25 M) should immediately appear suspect. One liter of water contains about 55 moles of water molecules, so molarities higher than 55 M are physically impossible.

FOR PRACTICE 13.5

What is the molarity of a 10.5% by mass glucose ($\text{C}_6\text{H}_{12}\text{O}_6$) solution? (The density of the solution is 1.03 g/mL.)

FOR MORE PRACTICE 13.5

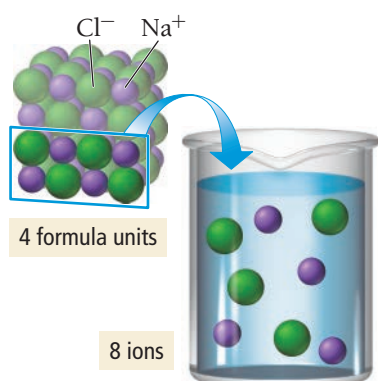
What is the molality of a 10.5% by mass glucose ($\text{C}_6\text{H}_{12}\text{O}_6$) solution? (The density of the solution is 1.03 g/mL.)



KEY CONCEPT VIDEO
Colligative Properties



▲ In winter, salt is applied to roads so that the ice will melt at lower temperatures.



▲ **FIGURE 13.13 Electrolyte Dissociation** When sodium chloride dissolves in water, each mole of NaCl produces 2 mol of particles: 1 mol of Na⁺ cations and 1 mol of Cl⁻ anions.

13.6 Colligative Properties: Vapor Pressure Lowering, Freezing Point Depression, Boiling Point Elevation, and Osmotic Pressure

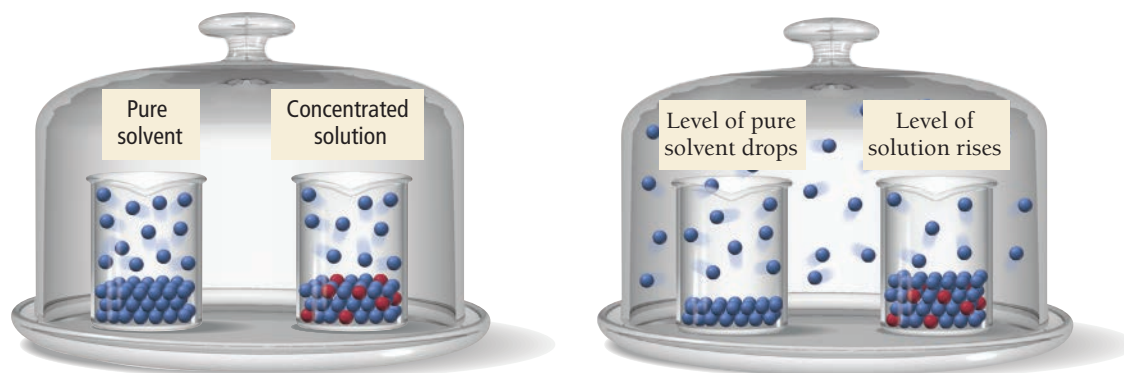
Have you ever wondered why salt is added to the ice in an ice-cream maker? Or why salt is scattered on icy roads in cold climates? Salt lowers the temperature at which a saltwater solution freezes. A salt and water solution is liquid even below 0°C. When salt is added to ice in the ice-cream maker, an ice/water/salt mixture forms that can reach a temperature of about -10°C, at which point the cream freezes. On the winter road, the salt allows the ice to melt when the ambient temperature is below freezing.

The depression of the freezing point of water by salt is an example of a **colligative property**, a property that depends on the number of particles dissolved in solution, not on the type of particle. In this section, we examine four colligative properties: vapor pressure lowering, freezing point depression, boiling point elevation, and osmotic pressure. Because these properties depend on the *number* of dissolved particles, we treat nonelectrolytes slightly differently than electrolytes when determining colligative properties. (See Section 8.4 for a review of the difference between electrolytes and nonelectrolytes.) When 1 mol of a nonelectrolyte dissolves in water, it forms 1 mol of dissolved particles. When 1 mol of an electrolyte dissolves in water, however, it normally forms more than 1 mol of dissolved particles (as illustrated in **Figure 13.13** ◀). For example, when 1 mol of NaCl dissolves in water, it forms 1 mol of dissolved Na⁺ ions and 1 mol of dissolved Cl⁻ ions. Therefore, the resulting solution has 2 mol of dissolved particles. The colligative properties of electrolyte solutions reflect this higher concentration of dissolved particles. In this section, we examine colligative properties of nonelectrolyte solutions; we then expand the concept to include electrolyte solutions in Section 13.7.

Vapor Pressure Lowering

Recall from Section 11.5 that the vapor pressure of a liquid is the pressure of the gas above the liquid when the two are in dynamic equilibrium (that is, when the rate of vaporization equals the rate of condensation). What is the effect of a nonvolatile nonelectrolyte solute on the vapor pressure of the liquid into which it dissolves? The basic answer to this question is that *the vapor pressure of the solution is lower than the vapor pressure of the pure solvent*.

The vapor pressure of a solution is lower than that of the pure solvent because of nature's tendency toward mixing (toward greater entropy) that we discussed in Section 13.2. We can see a dramatic demonstration of this tendency by placing a beaker of concentrated solution of a nonvolatile solute and a beaker of the pure solvent in a sealed container. Over time, the level of the pure solvent will drop, and the level of the solution will rise as molecules vaporize out of the pure solvent and condense into the solution. Why? The reason is nature's tendency to mix. If a pure solvent and concentrated solution are combined in a beaker, they naturally form a mixture in which the concentrated solution becomes less concentrated than it was initially. Similarly, if a pure solvent and concentrated solution are placed in a sealed container—even though they are in separate beakers—the two mix so that the concentrated solution becomes less concentrated.



The net transfer of solvent from the beaker containing pure solvent to the beaker containing the solution indicates that the vapor pressure of the solution is lower than that of the pure solvent. As solvent molecules vaporize, the vapor pressure in the sealed container rises. Before dynamic equilibrium can be attained, however, the pressure in the sealed container exceeds the vapor pressure of the solution, causing molecules to condense into the solution (the beaker on the right). Molecules constantly vaporize from the pure solvent (the beaker on the left), but the solvent's vapor pressure is never reached because molecules are constantly condensing into the solution. The result is a continuous transfer of solvent molecules from the pure solvent to the solution.

We can quantify the vapor pressure of a solution with **Raoult's law**:

$$P_{\text{solution}} = \chi_{\text{solvent}} P_{\text{solvent}}^{\circ}$$

In this equation, P_{solution} is the vapor pressure of the solution, χ_{solvent} is the mole fraction of the solvent, and $P_{\text{solvent}}^{\circ}$ is the vapor pressure of the pure solvent at the same temperature. For example, suppose a water sample at 25°C contains 0.90 mol of water and 0.10 mol of a nonvolatile solute such as sucrose. The pure water has a vapor pressure of 23.8 torr. We calculate the vapor pressure of the solution by substituting into Raoult's law:

$$\begin{aligned} P_{\text{solution}} &= \chi_{\text{H}_2\text{O}} P_{\text{H}_2\text{O}}^{\circ} \\ &= 0.90(23.8 \text{ torr}) \\ &= 21.4 \text{ torr} \end{aligned}$$

Notice that the vapor pressure of the solution is directly proportional to the amount of the solvent in the solution. Because the solvent particles compose 90% of all of the particles in the solution, the vapor pressure of the solution is 90% of the vapor pressure of the pure solvent.

EXAMPLE 13.6

Calculating the Vapor Pressure of a Solution Containing a Nonvolatile Nonelectrolyte Solute

Interactive
Worked Example
Video 13.6

PEARSON
eText
2.0

Calculate the vapor pressure at 25°C of a solution containing 99.5 g sucrose ($\text{C}_{12}\text{H}_{22}\text{O}_{11}$) and 300.0 mL water. The vapor pressure of pure water at 25°C is 23.8 torr. Assume the density of water to be 1.00 g/mL.

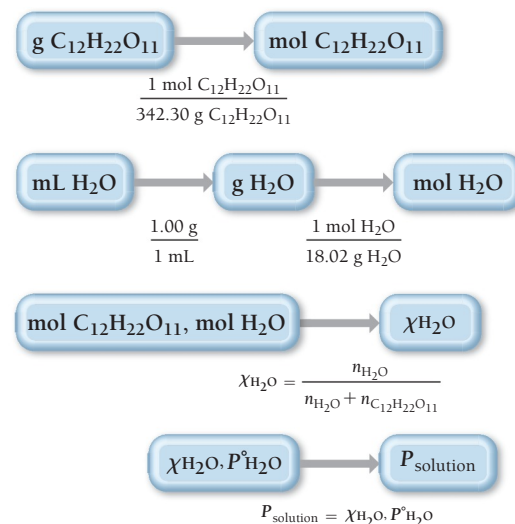
SORT You are given the mass of sucrose and volume of water in a solution. You are also given the vapor pressure and density of pure water and asked to find the vapor pressure of the solution.

GIVEN: 99.5 g $\text{C}_{12}\text{H}_{22}\text{O}_{11}$
300.0 mL H_2O
 $P_{\text{H}_2\text{O}}^{\circ} = 23.8 \text{ torr at } 25^{\circ}\text{C}$
 $d_{\text{H}_2\text{O}} = 1.00 \text{ g/mL}$

FIND: P_{solution}

STRATEGIZE Raoult's law relates the vapor pressure of a solution to the mole fraction of the solvent and the vapor pressure of the pure solvent. Begin by calculating the amount in moles of sucrose and water.

CONCEPTUAL PLAN



Calculate the mole fraction of the solvent from the calculated amounts of solute and solvent.

Then use Raoult's law to calculate the vapor pressure of the solution.

—Continued on the next page

Continued from the previous page—

SOLVE Calculate the number of moles of each solution component.

Use the number of moles of each component to calculate the mole fraction of the solvent (H_2O).

Use the mole fraction of water and the vapor pressure of pure water to calculate the vapor pressure of the solution.

SOLUTION

$$99.5 \text{ g } \text{C}_{12}\text{H}_{22}\text{O}_{11} \times \frac{1 \text{ mol } \text{C}_{12}\text{H}_{22}\text{O}_{11}}{342.30 \text{ g } \text{C}_{12}\text{H}_{22}\text{O}_{11}} = 0.2907 \text{ mol } \text{C}_{12}\text{H}_{22}\text{O}_{11}$$

$$300.0 \text{ mL } \text{H}_2\text{O} \times \frac{1.00 \text{ g}}{1 \text{ mL}} \times \frac{1 \text{ mol } \text{H}_2\text{O}}{18.02 \text{ g } \text{H}_2\text{O}} = 16.65 \text{ mol } \text{H}_2\text{O}$$

$$\begin{aligned} \chi_{\text{H}_2\text{O}} &= \frac{n_{\text{H}_2\text{O}}}{n_{\text{C}_{12}\text{H}_{22}\text{O}_{11}} + n_{\text{H}_2\text{O}}} \\ &= \frac{16.65 \text{ mol}}{0.2907 \text{ mol} + 16.65 \text{ mol}} \\ &= 0.9828 \end{aligned}$$

$$\begin{aligned} P_{\text{solution}} &= \chi_{\text{H}_2\text{O}} P_{\text{H}_2\text{O}}^{\circ} \\ &= 0.9828 (23.8 \text{ torr}) \\ &= 23.4 \text{ torr} \end{aligned}$$

CHECK The units of the answer are correct. The magnitude of the answer seems right because the calculated vapor pressure of the solution is just below that of the pure liquid, as you would expect for a solution with a large mole fraction of solvent.

FOR PRACTICE 13.6

Calculate the vapor pressure at 25°C of a solution containing 55.3 g ethylene glycol ($\text{HOCH}_2\text{CH}_2\text{OH}$) and 285.2 g water. The vapor pressure of pure water at 25°C is 23.8 torr.

FOR MORE PRACTICE 13.6

A solution containing ethylene glycol and water has a vapor pressure of 7.88 torr at 10°C . Pure water has a vapor pressure of 9.21 torr at 10°C . What is the mole fraction of ethylene glycol in the solution?

Over a complete range of composition of a solution, it no longer makes sense to designate a solvent and solute, so we simply label the two components A and B.

Vapor Pressures of Solutions Containing a Volatile (Nonelectrolyte) Solute

Some solutions contain not only a volatile solvent, but also a volatile *solute*. In this case, *both* the solvent and the solute contribute to the overall vapor pressure of the solution. A solution like this may be an **ideal solution** (in which case its behavior follows Raoult's law at all concentrations for both the solvent and the solute), or it may be nonideal (in which case it does not follow Raoult's law). An ideal solution is similar in concept to an ideal gas. Just as an ideal gas follows the ideal gas law exactly, an ideal solution follows Raoult's law exactly.

In an ideal solution, the solute–solvent interactions are similar in magnitude to the solute–solute and solvent–solvent interactions. In this type of solution, the solute simply dilutes the solvent and ideal behavior is observed. The vapor pressure of each solution component is described by Raoult's law throughout the entire composition range of the solution. For a two-component solution containing liquids A and B, we can write:

$$P_A = \chi_A P_A^{\circ}$$

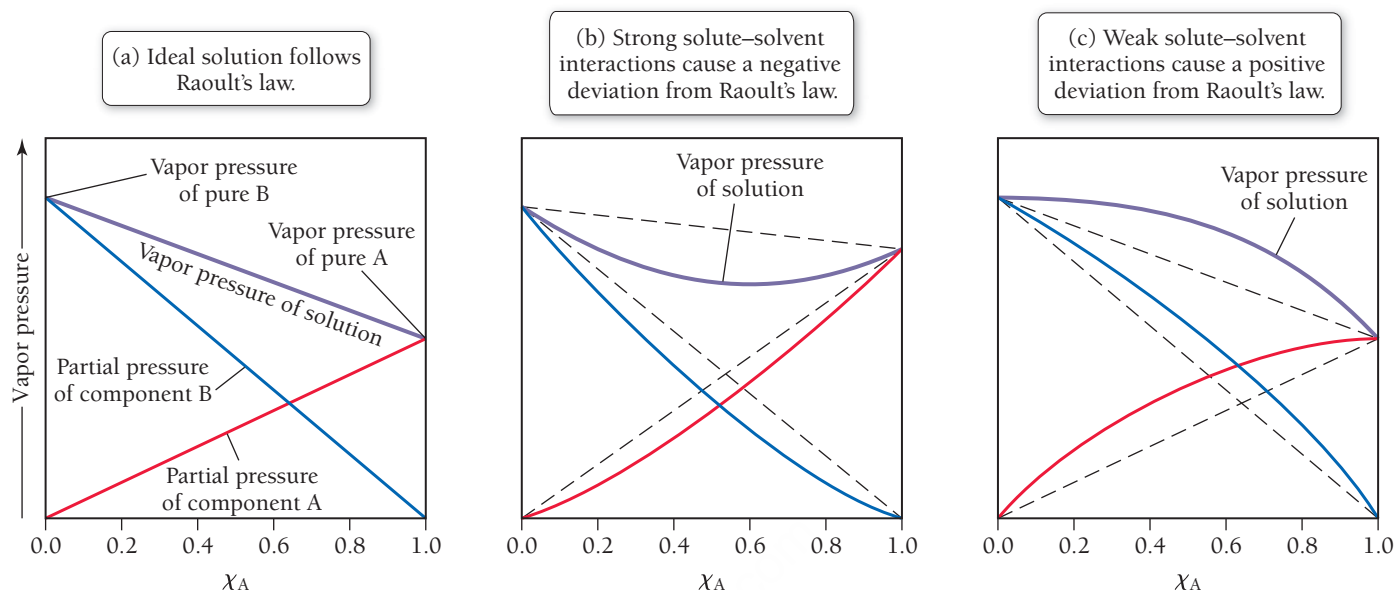
$$P_B = \chi_B P_B^{\circ}$$

The total pressure above such a solution is the sum of the partial pressures of the components:

$$P_{\text{tot}} = P_A + P_B$$

Figure 13.14(a) ► is a plot of vapor pressure versus solution composition for an ideal two-component solution.

Deviations from Raoult's Law

▲ **FIGURE 13.14** Behavior of Ideal and Nonideal Solutions

In a nonideal solution, the solute-solvent interactions are either stronger or weaker than the solvent-solvent interactions. If the solute-solvent interactions are stronger, then the solute tends to prevent the solvent from vaporizing as readily as it would otherwise. If the solution is sufficiently dilute, then the effect is small and Raoult's law works as an approximation. However, if the solution is not dilute, the effect is significant and the vapor pressure of the solution is *less than* that predicted by Raoult's law, as shown in **Figure 13.14(b)** ▲.

If, on the other hand, the solute-solvent interactions are weaker than the solvent-solvent interactions, then the solute tends to allow more vaporization than would occur with just the solvent. If the solution is not dilute, the effect is significant and the vapor pressure of the solution is *greater than* predicted by Raoult's law, as shown in **Figure 13.14(c)** ▲.

EXAMPLE 13.7**Calculating the Vapor Pressure of a Two-Component Solution**

A solution contains 3.95 g of carbon disulfide (CS_2) and 2.43 g of acetone (CH_3COCH_3). The vapor pressures at 35°C of pure carbon disulfide and pure acetone are 515 torr and 332 torr, respectively. Assuming ideal behavior, calculate the vapor pressures of each component and the total vapor pressure above the solution. The experimentally measured total vapor pressure of the solution at 35°C is 645 torr. Is the solution ideal? If not, what can you say about the relative strength of carbon disulfide-acetone interactions compared to the acetone-acetone and carbon disulfide-carbon disulfide interactions?

SORT You are given the masses and vapor pressures of carbon disulfide and acetone and are asked to find the vapor pressures of each component in the mixture and the total pressure assuming ideal behavior.

GIVEN: 3.95 g CS_2
 2.34 g CH_3COCH_3
 $P_{\text{CS}_2}^\circ = 515 \text{ torr (at } 35^\circ\text{C)}$
 $P_{\text{CH}_3\text{COCH}_3}^\circ = 332 \text{ torr (at } 35^\circ\text{C)}$
 $P_{\text{tot}}(\text{exp}) = 645 \text{ torr (at } 35^\circ\text{C)}$
FIND: P_{CS_2} , $P_{\text{CH}_3\text{COCH}_3}$, $P_{\text{tot}}(\text{ideal})$

—Continued on the next page

Continued from the previous page—

STRATEGIZE This problem requires the use of Raoult's law to calculate the partial pressures of each component. In order to use Raoult's law, you must first calculate the mole fractions of the two components. Convert the masses of each component to moles and use the definition of mole fraction to calculate the mole fraction of carbon disulfide. You can then find the mole fraction of acetone because the mole fractions of the two components add up to 1.

Use the mole fraction of each component along with Raoult's law to calculate the partial pressure of each component. The total pressure is the sum of the partial pressures.

SOLVE Begin by converting the mass of each component to the amounts in moles.

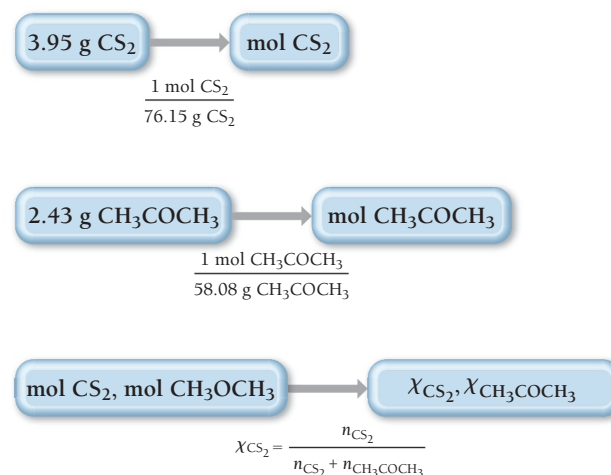
Calculate the mole fraction of carbon disulfide.

Calculate the mole fraction of acetone by subtracting the mole fraction of carbon disulfide from 1.

Calculate the partial pressures of carbon disulfide and acetone by using Raoult's law and the given values of the vapor pressures of the pure substances.

Calculate the total pressure by summing the partial pressures.

CONCEPTUAL PLAN



$$P_{\text{CS}_2} = X_{\text{CS}_2} P_{\text{CS}_2}^\circ$$

$$P_{\text{CH}_3\text{COCH}_3} = X_{\text{CH}_3\text{COCH}_3} P_{\text{CH}_3\text{COCH}_3}^\circ$$

$$P_{\text{tot}} = P_{\text{CS}_2} + P_{\text{CH}_3\text{COCH}_3}$$

RELATIONSHIPS USED

$$X_A = \frac{n_A}{n_A + n_B} \text{ (mole fraction definition)}$$

$$P_A = X_A P_A^\circ \text{ (Raoult's law)}$$

SOLUTION

$$3.95 \text{ g CS}_2 \times \frac{1 \text{ mol CS}_2}{76.15 \text{ g CS}_2} = 0.05187 \text{ mol CS}_2$$

$$2.43 \text{ g CH}_3\text{COCH}_3 \times \frac{1 \text{ mol CH}_3\text{COCH}_3}{58.08 \text{ g CH}_3\text{COCH}_3} = 0.04184 \text{ mol CH}_3\text{COCH}_3$$

$$X_{\text{CS}_2} = \frac{n_{\text{CS}_2}}{n_{\text{CS}_2} + n_{\text{CH}_3\text{COCH}_3}}$$

$$= \frac{0.05187 \text{ mol}}{0.05187 \text{ mol} + 0.04184 \text{ mol}}$$

$$= 0.5535$$

$$X_{\text{CH}_3\text{COCH}_3} = 1 - 0.5535$$

$$= 0.4465$$

$$P_{\text{CS}_2} = X_{\text{CS}_2} P_{\text{CS}_2}^\circ$$

$$= 0.5535 (515 \text{ torr})$$

$$= 285 \text{ torr}$$

$$P_{\text{CH}_3\text{COCH}_3} = X_{\text{CH}_3\text{COCH}_3} P_{\text{CH}_3\text{COCH}_3}^\circ$$

$$= 0.4465 (332 \text{ torr})$$

$$= 148 \text{ torr}$$

$$P_{\text{tot}}(\text{ideal}) = 285 \text{ torr} + 148 \text{ torr}$$

$$= 433 \text{ torr}$$

Lastly, compare the calculated total pressure for the ideal case to the experimentally measured total pressure. Since the experimentally measured pressure is greater than the calculated pressure, you can conclude that the interactions between the two components are weaker than the interactions between the components themselves.

$$P_{\text{tot}}(\text{exp}) = 645 \text{ torr}$$

$$P_{\text{tot}}(\text{exp}) > P_{\text{tot}}(\text{ideal})$$

The solution is not ideal and shows positive deviations from Raoult's law. Therefore, carbon disulfide–acetone interactions must be weaker than acetone–acetone and carbon disulfide–carbon disulfide interactions.

CHECK The units of the answer (torr) are correct. The magnitude seems reasonable given the partial pressures of the pure substances.

FOR PRACTICE 13.7

A solution of benzene (C_6H_6) and toluene (C_7H_8) is 25.0% benzene by mass. The vapor pressures of pure benzene and pure toluene at 25°C are 94.2 torr and 28.4 torr, respectively. Assuming ideal behavior, calculate the following:

- the vapor pressure of each solution component in the mixture
- the total pressure above the solution
- the composition of the vapor in mass percent

Why is the composition of the vapor different from the composition of the solution?

Raoult's Law

13.6
Cc

Conceptual
Connection

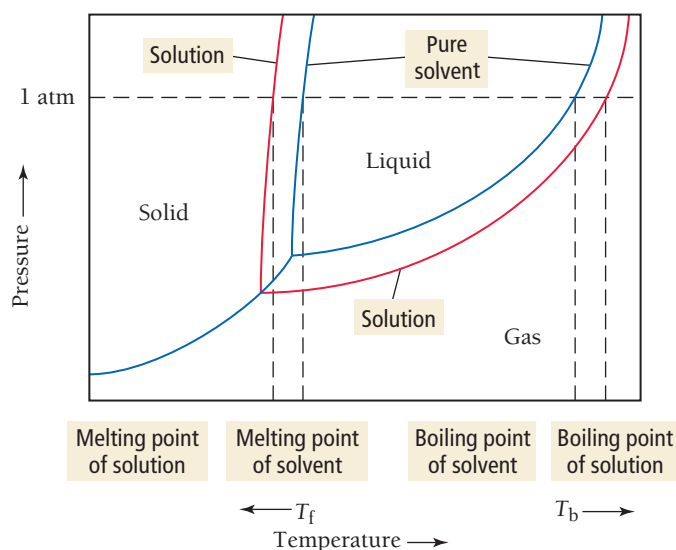


A solution contains equal amounts (in moles) of liquid components A and B. The vapor pressure of pure A is 100 mmHg, and that of pure B is 200 mmHg. The experimentally measured vapor pressure of the solution is 120 mmHg. What are the relative strengths of the solute–solute, solute–solvent, and solvent–solvent interactions in this solution?

Freezing Point Depression and Boiling Point Elevation

Vapor pressure lowering occurs at all temperatures. We can see the effect of vapor pressure lowering over a range of temperatures by comparing the phase diagrams for a pure solvent and for a solution containing a nonvolatile solute:

A nonvolatile solute lowers the vapor pressure of a solution, resulting in a lower freezing point and a higher boiling point.





▲ Antifreeze is an aqueous solution of ethylene glycol or propylene glycol. The solution has a lower freezing point and a higher boiling point than pure water.

Notice that the vapor pressure for the solution is shifted downward compared to that of the pure solvent. Consequently, the vapor pressure curve intersects the solid–gas curve at a lower temperature. The net effect is that the solution has a *lower melting point* and a *higher boiling point* than the pure solvent. These effects are called **freezing point depression** and **boiling point elevation**, both of which are colligative properties (like vapor pressure lowering).

The freezing point of a solution containing a nonvolatile solute is lower than the freezing point of the pure solvent. For example, antifreeze, used to prevent the freezing of engine blocks in cold climates, is an aqueous solution of ethylene glycol (C₂H₆O₂). The more concentrated the solution, the lower the freezing point becomes.

The amount that the freezing point decreases is given by the following equation:

$$\Delta T_f = m \times K_f$$

where

- ΔT_f is the change in temperature of the freezing point in Celsius degrees (relative to the freezing point of the pure solvent), usually reported as a positive number;
- m is the molality of the solution in moles solute per kilogram solvent; and
- K_f is the freezing point depression constant for the solvent.

For water,

$$K_f = 1.86^\circ\text{C}/m$$

When an aqueous solution containing a dissolved solid solute freezes slowly, the ice that forms does not normally contain much of the solute. For example, when ice forms in ocean water, the ice is not saltwater but freshwater. As the ice forms, the crystal structure of the ice tends to exclude the solute particles. You can verify this yourself by partially freezing a saltwater solution in the freezer. Take out the newly formed ice, rinse it several times, and taste it. Compare its taste to the taste of the original solution. The ice is much less salty.

Table 13.6 lists freezing point depression and boiling point elevation constants for several liquids. Calculating the freezing point of a solution involves substituting into the freezing point depression equation, as Example 13.8 demonstrates.

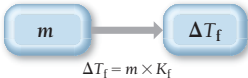
TABLE 13.6 Freezing Point Depression and Boiling Point Elevation Constants for Several Liquid Solvents

Solvent	Normal Freezing Point (°C)	K_f (°C/ m)	Normal Boiling Point (°C)	K_b (°C/ m)
Benzene (C ₆ H ₆)	5.5	5.12	80.1	2.53
Carbon tetrachloride (CCl ₄)	−22.9	29.9	76.7	5.03
Chloroform (CHCl ₃)	−63.5	4.70	61.2	3.63
Ethanol (C ₂ H ₅ OH)	−114.1	1.99	78.3	1.22
Diethyl ether (C ₄ H ₁₀ O)	−116.3	1.79	34.6	2.02
Water (H ₂ O)	0.00	1.86	100.0	0.512

EXAMPLE 13.8

Freezing Point Depression

What is the freezing point of a 1.7-*m* aqueous ethylene glycol solution?

SORT You are given the molality of a solution and asked to find its freezing point.	GIVEN: 1.7- <i>m</i> solution FIND: freezing point (from Δ <i>T</i> _f)
STRATEGIZE To solve this problem, use the freezing point depression equation.	CONCEPTUAL PLAN 
SOLVE Substitute into the equation to calculate Δ <i>T</i> _f . The actual freezing point is the freezing point of pure water (0.00°C) − Δ <i>T</i> _f .	SOLUTION $\Delta T_f = m \times K_f$ $= 1.7\,m \times 1.86^\circ\text{C}/m$ $= 3.2^\circ\text{C}$ $\text{freezing point} = 0.00^\circ\text{C} - 3.2^\circ\text{C}$ $= -3.2^\circ\text{C}$
CHECK The units of the answer are correct. The magnitude seems about right. The expected range for freezing points of an aqueous solution is anywhere from −10°C to just below 0°C. Any answers out of this range would be suspect.	
FOR PRACTICE 13.8 Calculate the freezing point of a 2.6- <i>m</i> aqueous sucrose solution.	

The boiling point of a solution containing a nonvolatile solute is higher than the boiling point of the pure solvent. In automobiles, antifreeze not only prevents the freezing of water within engine blocks in cold climates, it also prevents the boiling of water within engine blocks in hot climates. The amount that the boiling point rises in solutions is given by the equation:

$$\Delta T_b = m \times K_b$$

where

- Δ*T*_b is the change in temperature of the boiling point in Celsius degrees (relative to the boiling point of the pure solvent);
- *m* is the molality of the solution in moles solute per kilogram solvent; and
- *K*_b is the boiling point elevation constant for the solvent.

For water,

$$K_b = 0.512^\circ\text{C}/m$$

Calculating the boiling point of a solution involves substituting into the boiling point elevation equation, as Example 13.9 demonstrates.

Boiling Point Elevation

Solution A is a 1.0-M solution with a nonionic solute and water as the solvent. Solution B is a 1.0-M solution with the same nonionic solute as solution A and ethanol as the solvent. Which solution has the greater increase in its boiling point relative to its pure solvent?

13.7

Cc

Conceptual Connection



EXAMPLE 13.9

Boiling Point Elevation

Interactive
Worked Example
Video 13.9PEARSON
eText
2.0

What mass of ethylene glycol ($\text{C}_2\text{H}_6\text{O}_2$), in grams, must you add to 1.0 kg of water to produce a solution that boils at 105.0°C ? (Since pure water boils at 100.0°C , the change in boiling point is 5.0°C .)

SORT You are given the desired boiling point of an ethylene glycol solution containing 1.0 kg of water and asked to determine the mass of ethylene glycol needed to achieve the boiling point.

STRATEGIZE To solve this problem, use the boiling point elevation equation to calculate the desired molality of the solution from ΔT_b .

Then use that molality to determine how many moles of ethylene glycol are needed per kilogram of water. Finally, calculate the molar mass of ethylene glycol and use it to convert from moles of ethylene glycol to mass of ethylene glycol.

SOLVE Begin by solving the boiling point elevation equation for molality and substituting the required quantities to calculate m .

CHECK The units of the answer are correct. The magnitude might seem a little high initially, but the boiling point elevation constant is so small that a lot of solute is required to raise the boiling point by a small amount.

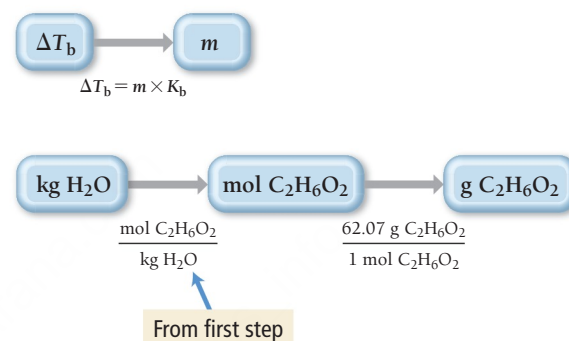
FOR PRACTICE 13.9

Calculate the boiling point of a 3.60- m aqueous sucrose solution.

GIVEN: $\Delta T_b = 5.0^\circ\text{C}$, 1.0 kg H_2O

FIND: g $\text{C}_2\text{H}_6\text{O}_2$

CONCEPTUAL PLAN



RELATIONSHIPS USED

$\text{C}_2\text{H}_6\text{O}_2$ molar mass = 62.07 g/mol

$\Delta T_b = m \times K_b$ (boiling point elevation)

SOLUTION

$$\Delta T_b = m \times K_b$$

$$m = \frac{\Delta T_b}{K_b} = \frac{5.0^\circ\text{C}}{0.512^\circ\text{C}/m} = 9.77m$$

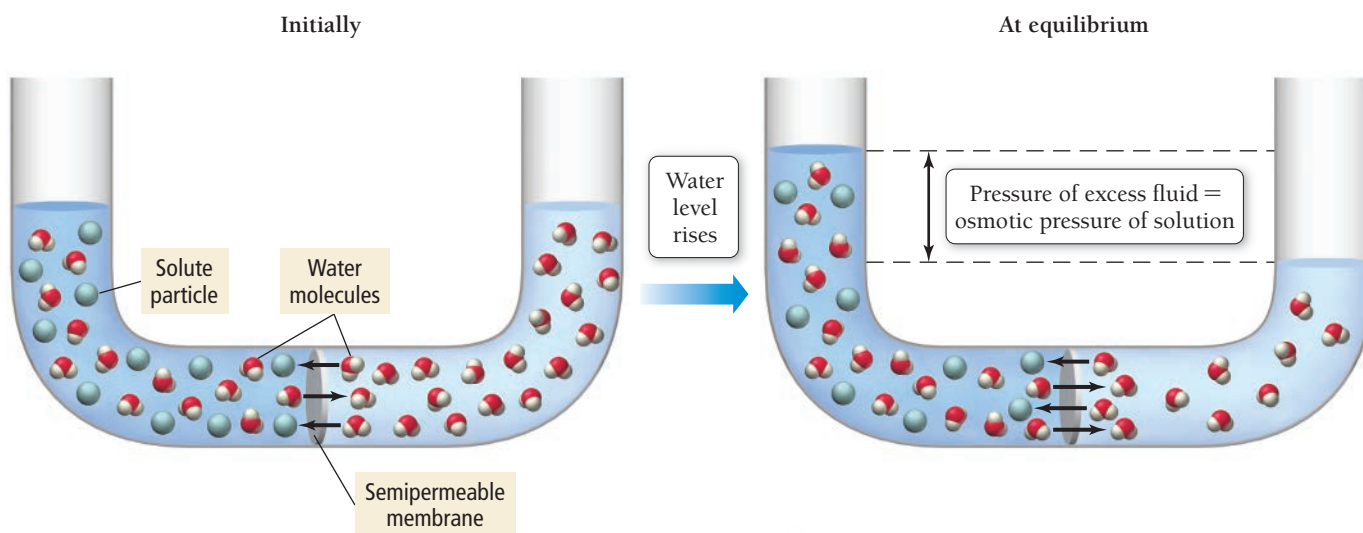
$$1.0 \text{ kg H}_2\text{O} \times \frac{9.77 \text{ mol C}_2\text{H}_6\text{O}_2}{\text{kg H}_2\text{O}} \times \frac{62.07 \text{ g C}_2\text{H}_6\text{O}_2}{1 \text{ mol C}_2\text{H}_6\text{O}_2} = 6.1 \times 10^2 \text{ g C}_2\text{H}_6\text{O}_2$$

Osmotic Pressure

Osmosis is the flow of solvent from a solution of lower solute concentration to one of higher solute concentration. Concentrated solutions draw solvent from more dilute solutions because of nature's tendency to mix. **Figure 13.15** illustrates an osmosis cell. The left side of the cell contains a concentrated saltwater solution, and the right side of the cell contains pure water. A **semipermeable membrane**—a membrane that selectively allows some substances to pass through but not others—separates the two halves of the cell.

Water flows by osmosis from the pure-water side of the cell through the semipermeable membrane and into the saltwater side. Over time, the water level on the left side of the cell rises, while the water level on the right side of the cell falls. Notice the similarity between osmosis and vapor pressure lowering.

Osmosis and Osmotic Pressure



▲ **FIGURE 13.15 An Osmosis Cell** In an osmosis cell, water flows from the pure-water side of the cell through the semipermeable membrane to the saltwater side.

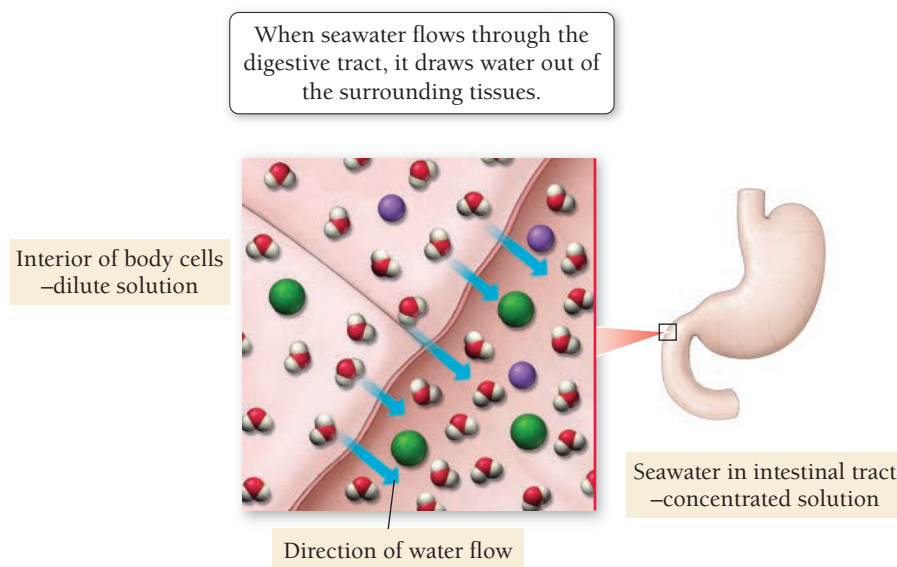
In both cases, as a solution becomes concentrated, it develops a tendency to draw pure solvent to itself. In the case of vapor pressure lowering, the pure solvent is drawn from the gas state. In the case of osmosis, the pure solvent is drawn from the liquid state. In both cases, the solution becomes more dilute as it draws the pure solvent to itself—nature's tendency to mix is powerful.

If external pressure is applied to the solution in the left side of the cell, this process can be opposed and even stopped. The pressure required to stop the osmotic flow, called the **osmotic pressure**, is given by the following equation:

$$\Pi = MRT$$

where M is the molarity of the solution, T is the temperature (in kelvins), and R is the ideal gas constant ($0.08206 \text{ L} \cdot \text{atm}/\text{mol} \cdot \text{K}$).

Osmosis is the reason that you should never drink seawater—or any concentrated solution. Seawater draws water *out of the body* as it passes through the stomach and intestines, resulting in diarrhea and further dehydration (**Figure 13.16 ▼**). We can think of seawater as a *thirsty solution*—one that draws more water to itself. Consequently, seawater should never be consumed as drinking water.



◀ **FIGURE 13.16 The Effect of Drinking Seawater** Seawater is a more concentrated solution than the fluids in body cells. As a result, when seawater flows through the digestive tract, it draws water out of the surrounding tissues.

EXAMPLE 13.10**Osmotic Pressure**

The osmotic pressure of a solution containing 5.87 mg of an unknown protein per 10.0 mL of solution is 2.45 torr at 25°C. Find the molar mass of the unknown protein.

SORT The problem states that a solution of an unknown protein contains 5.87 mg of the protein per 10.0 mL of solution. You are also given the osmotic pressure of the solution at a particular temperature and asked to find the molar mass of the unknown protein.

STRATEGIZE Step 1: Use the given osmotic pressure and temperature to find the molarity of the protein solution.

Step 2: Use the molarity calculated in Step 1 to find the number of moles of protein in 10 mL of solution.

Step 3: Finally, use the number of moles of the protein calculated in Step 2 and the given mass of the protein in 10.0 mL of solution to find the molar mass.

SOLVE

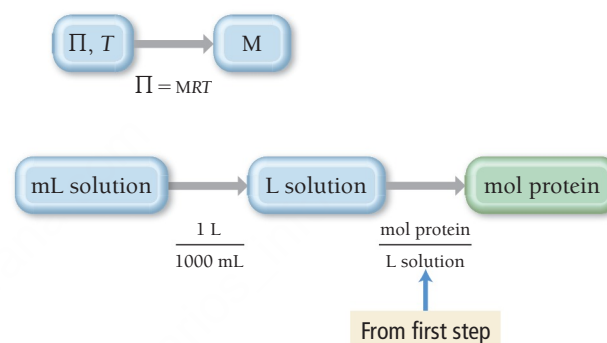
Step 1: Begin by solving the osmotic pressure equation for molarity and substituting in the required quantities in the correct units to calculate M.

Step 2: Begin with the given volume, convert to liters, then use the molarity to find the number of moles of protein.

Step 3: Use the given mass and the number of moles from Step 2 to calculate the molar mass of the protein.

GIVEN: 5.87 mg of protein
10.0-mL solution
 $\Pi = 2.45$ torr
 $T = 25^\circ\text{C}$

FIND: molar mass of protein (g/mol)

CONCEPTUAL PLAN

$$\text{molar mass} = \frac{\text{mass protein}}{\text{moles protein}}$$

RELATIONSHIPS USED $\Pi = MRT$ (osmotic pressure equation)

SOLUTION

$$\Pi = MRT$$

$$M = \frac{\Pi}{RT} = \frac{2.45 \text{ torr} \times \frac{1 \text{ atm}}{760 \text{ torr}}}{0.08206 \frac{\text{L} \cdot \text{atm}}{\text{mol} \cdot \text{K}} (298 \text{ K})}$$

$$= 1.318 \times 10^{-4} \text{ M}$$

$$10.0 \text{ mL} \times \frac{1 \text{ L}}{1000 \text{ mL}} \times \frac{1.318 \times 10^{-4} \text{ mol}}{\text{L}} = 1.318 \times 10^{-6} \text{ mol}$$

$$\text{molar mass} = \frac{\text{mass protein}}{\text{moles protein}}$$

$$= \frac{5.87 \times 10^{-3} \text{ g}}{1.318 \times 10^{-6} \text{ mol}}$$

$$= 4.45 \times 10^3 \text{ g/mol}$$

CHECK The units of the answer are correct. The magnitude might seem a little high initially, but proteins are large molecules and therefore have high molar masses.

FOR PRACTICE 13.10

Calculate the osmotic pressure (in atm) of a solution containing 1.50 g of ethylene glycol ($\text{C}_2\text{H}_6\text{O}_2$) in 50.0 mL of solution at 25°C.

13.7 Colligative Properties of Strong Electrolyte Solutions

At the beginning of Section 13.6, we saw that colligative properties depend on the number of dissolved particles and that we therefore must treat electrolytes slightly differently than nonelectrolytes when determining colligative properties. For example, the freezing point depression of a 0.10-*m* sucrose solution is $\Delta T_f = 0.186^\circ\text{C}$. However, the freezing point depression of a 0.10-*m* sodium chloride solution is nearly twice this large. Why? Because 1 mol of sodium chloride dissociates into nearly 2 mol of ions in solution. The ratio of moles of particles in solution to moles of formula units dissolved is called the **van't Hoff factor (*i*)**:

$$i = \frac{\text{moles of particles in solution}}{\text{moles of formula units dissolved}}$$

Because 1 mol of NaCl produces 2 mol of particles in solution, we expect the van't Hoff factor for NaCl to be exactly 2. In reality, this expected factor only occurs in very dilute solutions. For example, the van't Hoff factor for a 0.10-*m* NaCl solution is 1.87, and that for a 0.010-*m* NaCl solution is 1.94. The van't Hoff factor approaches the expected value at infinite dilution (as the concentration approaches zero). Table 13.7 lists the actual and expected van't Hoff factors for a number of solutes.

The van't Hoff factor does not exactly equal the expected value because some ions effectively pair in solution. We expect the dissociation of an ionic compound to be complete in solution. In reality, however, the dissociation is not complete—at any given moment, some cations are pairing with anions (**Figure 13.17** ▼), slightly reducing the number of particles in solution.

To calculate freezing point depression, boiling point elevation, and osmotic pressure of ionic solutions, we use the van't Hoff factor in each equation as follows:

$$\begin{aligned}\Delta T_f &= im \times K_f \text{ (freezing point depression)} \\ \Delta T_b &= im \times K_b \text{ (boiling point elevation)} \\ \Pi &= iMRT \text{ (osmotic pressure)}\end{aligned}$$

TABLE 13.7 Van't Hoff Factors at 0.05-*m* Concentration in Aqueous Solution

Solute	<i>i</i> Expected	<i>i</i> Measured
Nonelectrolyte	1	1
NaCl	2	1.9
MgSO ₄	2	1.3
MgCl ₂	3	2.7
K ₂ SO ₄	3	2.6
FeCl ₃	4	3.4



FIGURE 13.17 Ion Pairing
In solutions, hydrated anions and cations may get close enough together to effectively pair, lowering the concentration of particles more than would be expected.

Colligative Properties

- Which aqueous solution has the highest boiling point?
- (a) 0.50 M C₁₂H₂₂O₁₁
 - (b) 0.50 M NaCl
 - (c) 0.50 M MgCl₂

13.8 Cc

Conceptual Connection



EXAMPLE 13.11

Van't Hoff Factor and Freezing Point Depression

The freezing point of an aqueous 0.050-*m* CaCl₂ solution is −0.27°C. What is the van't Hoff factor (*i*) for CaCl₂ at this concentration? How does it compare to the expected value of *i*?

SORT You are given the molality of a solution and its freezing point. You are asked to find the value of *i*—the van't Hoff factor—and compare it to the expected value.

GIVEN: 0.050-*m* CaCl₂ solution, Δ*T*_f = 0.27°C
FIND: *i*

STRATEGIZE To solve this problem, use the freezing point depression equation including the van't Hoff factor.

CONCEPTUAL PLAN
Δ*T*_f = *im* × *K*_f

SOLVE Solve the freezing point depression equation for *i*, substituting in the given quantities to calculate its value.
The expected value of *i* for CaCl₂ is 3 because calcium chloride forms 3 mol of ions for each mole of calcium chloride that dissolves. The experimental value is slightly less than 3, probably because of ion pairing.

SOLUTION
Δ*T*_f = *im* × *K*_f
$$i = \frac{\Delta T_f}{m \times K_f}$$
$$= \frac{0.27\text{ }^{\circ}\text{C}}{0.050\text{ }m \times \frac{1.86\text{ }^{\circ}\text{C}}{m}}$$
$$= 2.9$$

CHECK The answer has no units, as expected, as *i* is a ratio. The magnitude is about right because it is close to the value you would expect upon complete dissociation of CaCl₂.

FOR PRACTICE 13.11

Calculate the freezing point of an aqueous 0.10-*m* FeCl₃ solution using a van't Hoff factor of 3.2.

Strong Electrolytes and Vapor Pressure

Just as the freezing point depression of a solution containing an electrolyte solute is greater than that of a solution containing the same concentration of a nonelectrolyte solute, so the vapor pressure lowering is greater (for the same reasons). The vapor pressure for a sodium chloride solution, for example, decreases about twice as much as it does for a nonelectrolyte solution of the same concentration. To calculate the vapor pressure of a solution containing an ionic solute, we need to account for the dissociation of the solute when we calculate the mole fraction of the solvent, as demonstrated in Example 13.12.

EXAMPLE 13.12

Calculating the Vapor Pressure of a Solution Containing an Ionic Solute

A solution contains 0.102 mol Ca(NO₃)₂ and 0.927 mol H₂O. Calculate the vapor pressure of the solution at 55°C. The vapor pressure of pure water at 55°C is 118.1 torr. (Assume that the solute completely dissociates.)

SORT You are given the number of moles of each component of a solution and asked to find the vapor pressure of the solution. You are also given the vapor pressure of pure water at the appropriate temperature.

GIVEN: 0.102 mol Ca(NO₃)₂
0.927 mol H₂O
*P*_{H₂O}[°] = 118.1 torr (at 55°C)
FIND: *P*_{solution}

STRATEGIZE To solve this problem, use Raoult's law as you did in Example 13.6. Calculate χ_{solvent} from the given amounts of solute and solvent.

CONCEPTUAL PLAN

χ_{H₂O}, *P*_{H₂O}[°]

 →

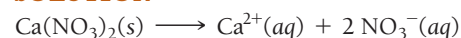
*P*_{solution}

*P*_{solution} = χ_{H₂O}*P*_{H₂O}[°]

SOLVE The key to solving this problem is understanding the dissociation of calcium nitrate. Write an equation showing the dissociation. Since 1 mol of calcium nitrate dissociates into 3 mol of dissolved particles, you must multiply the number of moles of calcium nitrate by 3 when you calculate the mole fraction.

Use the mole fraction of water and the vapor pressure of pure water to calculate the vapor pressure of the solution.

SOLUTION



$$\begin{aligned}\chi_{\text{H}_2\text{O}} &= \frac{n_{\text{H}_2\text{O}}}{3 \times n_{\text{Ca}(\text{NO}_3)_2} + n_{\text{H}_2\text{O}}} \\ &= \frac{0.927 \text{ mol}}{3(0.102) \text{ mol} + 0.927 \text{ mol}} \\ &= 0.7518\end{aligned}$$

$$\begin{aligned}P_{\text{solution}} &= \chi_{\text{H}_2\text{O}} P_{\text{H}_2\text{O}}^{\circ} \\ &= 0.7518 (118.1 \text{ torr}) \\ &= 88.8 \text{ torr}\end{aligned}$$

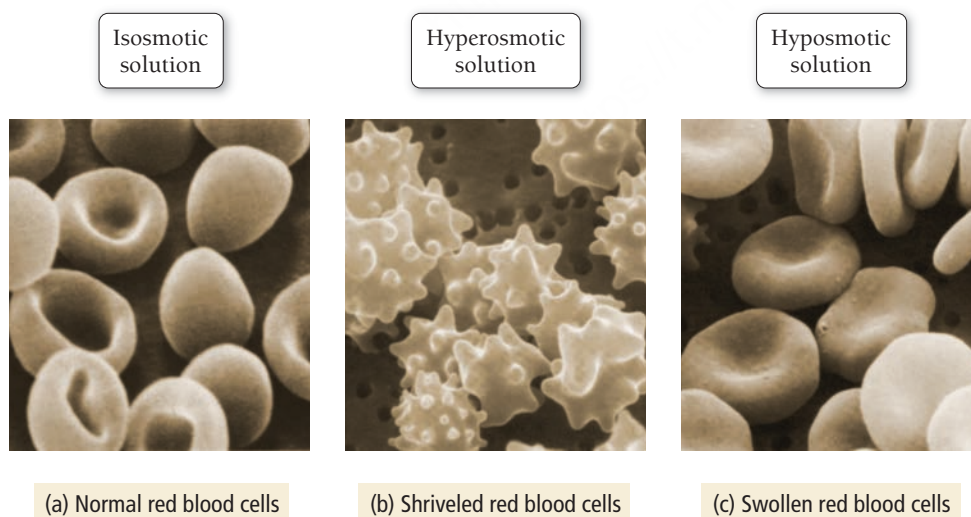
CHECK The units of the answer are correct. The magnitude also seems right because the calculated vapor pressure of the solution is significantly less than that of the pure solvent, as you would expect for a solution with a significant amount of solute.

FOR PRACTICE 13.12

A solution contains 0.115 mol H_2O and an unknown number of moles of sodium chloride. The vapor pressure of the solution at 30°C is 25.7 torr. The vapor pressure of pure water at 30°C is 31.8 torr. Calculate the number of moles of sodium chloride in the solution.

Colligative Properties and Medical Solutions


Doctors and other health care workers often administer solutions to patients. The osmotic pressure of these solutions is controlled to ensure the desired effect on the patient. Intravenous (IV) solutions—those that are administered directly into a patient's veins—must have osmotic pressures equal to those of body fluids. These solutions are called *isosmotic* (or *isotonic*) (**Figure 13.18(a)** ▼). Solutions having osmotic pressures greater than those of body fluids are *hyperosmotic*. These solutions take water out of cells and tissues. When a human cell is placed in a hyperosmotic solution, it tends to shrivel as it loses water to the surrounding solution (**Figure 13.18(b)** ▼). Solutions having osmotic pressures less than those of body fluids are *hyposmotic*. These solutions pump water into cells. When a human cell is placed in a hyposmotic solution—such as pure water, for example—water enters the cell, sometimes causing it to burst (**Figure 13.18(c)** ▼).



◀ **FIGURE 13.18 Red Blood Cells and Osmosis** (a) In an isosmotic solution, red blood cells have the normal shape shown here. In a hyperosmotic solution (b), they lose water and shrivel. In a hyposmotic solution (c), they swell up and may burst as water flows into the cell.

When intravenous fluids are given in a hospital, the majority of the fluid is usually an isosmotic saline solution—a solution containing 0.9 g NaCl per 100 mL of solution. In medicine and in other health-related fields, solution concentrations are often reported in units that indicate the mass of the solute per given volume of solution. Also common is percent mass to volume—which is the mass of the

solute in grams divided by the volume of the solution in milliliters times 100%. In these units, the concentration of an isotonic saline solution is 0.9% mass/volume.



► Fluids used for intravenous transfusion must be isosmotic with bodily fluids—that is, they must have the same osmotic pressure.

SELF-ASSESSMENT

QUIZ

PEARSON
eText
2.0

- Which compound is most soluble in octane (C_8H_{18})?
a) CH_3OH b) CBr_4 c) H_2O d) NH_3
- An aqueous solution is saturated in both potassium chlorate and carbon dioxide gas at room temperature. What happens when the solution is warmed to $85^\circ C$?
a) Potassium chlorate precipitates out of solution.
b) Carbon dioxide bubbles out of solution.
c) Potassium chlorate precipitates out of solution, and carbon dioxide bubbles out of solution.
d) Nothing happens; all of the potassium chlorate and the carbon dioxide remain dissolved in solution.
- A 500.0-mL sample of pure water is allowed to come to equilibrium with pure oxygen gas at a pressure of 755 mmHg. What mass of oxygen gas dissolves in the water? (The Henry's law constant for oxygen gas at $25^\circ C$ is $1.3 \times 10^{-3} M/atm$.)
a) 15.7 g b) $6.5 \times 10^{-3} g$ c) 0.041 g d) 0.021 g
- A potassium bromide solution is 7.55% potassium bromide by mass, and its density is 1.03 g/mL. What mass of potassium bromide is contained in 35.8 mL of the solution?
a) 2.78 g b) 2.70 g c) 4.88 g d) 2.62 g
- A solution contains 22.4 g glucose ($C_6H_{12}O_6$) dissolved in 0.500 L of water. What is the molality of the solution? (Assume a density of 1.00 g/mL for water.)
a) 0.238 m b) 44.8 m c) 0.249 m d) 4.03 m
- A sodium nitrate solution is 12.5% $NaNO_3$ by mass and has a density of 1.02 g/mL. Calculate the molarity of the solution.
a) 1.44 M b) 12.8 M c) 6.67 M d) 1.50 M
- What is the vapor pressure of an aqueous ethylene glycol ($C_2H_6O_2$) solution that is 14.8% $C_2H_6O_2$ by mass? The vapor pressure of pure water at $25^\circ C$ is 23.8 torr.
a) 3.52 torr b) 22.7 torr
c) 1.14 torr d) 20.3 torr
- A solution contains a mixture of two volatile substances A and B. The mole fraction of substance A is 0.35. At $32^\circ C$ the vapor pressure of pure A is 87 mmHg, and the vapor pressure of pure B is 122 mmHg. What is the total vapor pressure of the solution at this temperature?
a) 110 mmHg b) 209 mmHg
c) 99.3 mmHg d) 73.2 mmHg
- What mass of glucose ($C_6H_{12}O_6$) should you dissolve in 10.0 kg of water to obtain a solution with a freezing point of $-4.2^\circ C$?
a) 0.023 kg b) 4.1 kg
c) 0.41 kg d) 14.1 kg
- Which aqueous solution has the highest boiling point?
a) 1.25 M $C_6H_{12}O_6$
b) 1.25 M KNO_3
c) 1.25 M $Ca(NO_3)_2$
d) none of the above (they all have the same boiling point)
- The osmotic pressure of a solution containing 22.7 mg of an unknown protein in 50.0 mL of solution is 2.88 mmHg at $25^\circ C$. Determine the molar mass of the protein.
a) 246 g/mol b) 3.85 g/mol
c) $2.93 \times 10^3 g/mol$ d) 147 g/mol

12. The enthalpy of solution for NaOH is -44.46 kJ/mol . What can you conclude about the relative magnitudes of the absolute values of ΔH_{solute} and $\Delta H_{\text{hydration}}$, where ΔH_{solute} is the heat associated with separating the solute particles and $\Delta H_{\text{hydration}}$ is the heat associated with dissolving the solute particles in water?
- $|\Delta H_{\text{solute}}| > |\Delta H_{\text{hydration}}|$
 - $|\Delta H_{\text{solute}}| < |\Delta H_{\text{hydration}}|$
 - $|\Delta H_{\text{solute}}| = |\Delta H_{\text{hydration}}|$
 - none of the above (nothing can be concluded about the relative magnitudes)
13. A 2.4-m aqueous solution of an ionic compound with the formula MX_2 has a boiling point of 103.4°C . Calculate the van't Hoff factor (i) for MX_2 at this concentration.
- 2.8
 - 83
 - 0.73
 - 1.0
14. A solution is an equimolar mixture of two volatile components A and B. Pure A has a vapor pressure of 50 torr, and pure B has a vapor pressure of 100 torr. The vapor pressure of the mixture is 85 torr. What can you conclude about the relative strengths of the intermolecular forces between particles of A and B (relative to those between particles of A and those between particles of B)?
- The intermolecular forces between particles A and B are *weaker* than those between particles of A and those between particles of B.
 - The intermolecular forces between particles A and B are *stronger* than those between particles of A and those between particles of B.
 - The intermolecular forces between particles A and B are *the same as* those between particles of A and those between particles of B.
 - Nothing can be concluded about the relative strengths of intermolecular forces from this observation.
15. An aqueous solution is in equilibrium with a gaseous mixture containing an equal number of moles of oxygen, nitrogen, and helium. Rank the relative concentrations of each gas in the aqueous solution from highest to lowest.
- $[\text{O}_2] > [\text{N}_2] > [\text{He}]$
 - $[\text{He}] > [\text{N}_2] > [\text{O}_2]$
 - $[\text{N}_2] > [\text{He}] > [\text{O}_2]$
 - $[\text{N}_2] > [\text{O}_2] > [\text{He}]$

Answers: 1. b; 2. b; 3. d; 4. a; 5. c; 6. d; 7. b; 8. a; 9. b; 10. c; 11. c; 12. b; 13. a; 14. a; 15. a

CHAPTER SUMMARY 13

REVIEW

MasteringChemistry™ provides end-of-chapter exercises, feedback-enriched tutorial problems, animations, and interactive activities to encourage problem solving practice and deeper understanding of key concepts and topics.

KEY LEARNING OUTCOMES

CHAPTER OBJECTIVES	ASSESSMENT
Determine Whether a Solute Is Soluble in a Solvent (13.2)	• Example 13.1 For Practice 13.1 Exercises 25–30
Use Henry's Law to Predict the Solubility of Gases with Increasing Pressure (13.4)	• Example 13.2 For Practice 13.2 Exercises 41–46
Calculate Concentrations of Solutions (13.5)	• Examples 13.3, 13.4 For Practice 13.3, 13.4 For More Practice 13.3 Exercises 47, 48, 59, 60
Convert between Concentration Units (13.5)	• Example 13.5 For Practice 13.5 Exercises 61–64
Determine the Vapor Pressure of a Solution Containing a Nonelectrolyte and Nonvolatile Solute (13.6)	• Example 13.6 For Practice 13.6 For More Practice 13.6 Exercises 67, 68
Determine the Vapor Pressure of a Two-Component Solution (13.6)	• Example 13.7 For Practice 13.7 Exercises 69–72
Calculate Freezing Point Depression (13.6)	• Example 13.8 For Practice 13.8 Exercises 73–76, 83–85
Calculate Boiling Point Elevation (13.6)	• Example 13.9 For Practice 13.9 Exercises 73, 74, 83, 84, 86, 87
Determine the Osmotic Pressure (13.6)	• Example 13.10 For Practice 13.10 Exercises 79–82
Determine and Use the van't Hoff Factor (13.7)	• Example 13.11 For Practice 13.11 Exercises 83–85, 87–92
Determine the Vapor Pressure of a Solution Containing an Ionic Solute (13.7)	• Example 13.12 For Practice 13.12 Exercises 93, 94

KEY TERMS

Section 13.1

solution (540)
solvent (540)
solute (540)

Section 13.2

aqueous solution (540)
solubility (540)
entropy (541)
miscible (542)

Section 13.3

enthalpy of solution (ΔH_{soln}) (545)
heat of hydration ($\Delta H_{\text{hydration}}$) (546)

Section 13.4

dynamic equilibrium (549)
saturated solution (549)
unsaturated solution (549)
supersaturated solution (549)
recrystallization (550)
Henry's law (551)

Section 13.5

dilute solution (552)
concentrated solution (552)
molarity (M) (553)
molality (m) (554)
parts by mass (554)

percent by mass (554)
parts per million (ppm) (554)
parts per billion (ppb) (554)
parts by volume (554)
mole fraction (χ_{solute}) (555)
mole percent (mol %) (556)

Section 13.6

colligative property (558)
Raoult's law (559)
ideal solution (560)
freezing point depression (564)
boiling point elevation (564)
osmosis (566)

semipermeable membrane (566)
osmotic pressure (567)

Section 13.7

van't Hoff factor (i) (569)

KEY CONCEPTS

Solutions (13.1, 13.2)

- A solution is a homogeneous mixture of two or more substances. In a solution; the majority component is the solvent and the minority component is the solute.
- The tendency toward greater entropy (or greater energy dispersal) is the driving force for solution formation.
- In aqueous solutions, water is a solvent, and a solid, liquid, or gas is the solute.

Solubility and Energetics of Solution Formation (13.2, 13.3)

- The solubility of a substance is the amount of the substance that will dissolve in a given amount of solvent. The solubility of one substance in another depends on the types of intermolecular forces that exist *between* the substances as well as *within* each substance.
- We determine the overall enthalpy change upon solution formation by adding the enthalpy changes for the three steps of solution formation: (1) separation of the solute particles, (2) separation of the solvent particles, and (3) mixing of the solute and solvent particles. The first two steps are both endothermic, while the last is exothermic.
- In aqueous solutions of an ionic compound, we combine the change in enthalpy for Steps 2 and 3 as the heat of hydration ($\Delta H_{\text{hydration}}$), which is always negative.

Solution Equilibrium (13.4)

- Dynamic equilibrium in a solution occurs when the rates of dissolution and recrystallization in a solution are equal. A solution in this state is saturated. Solutions containing less than or more than the equilibrium amount of solute are unsaturated or supersaturated, respectively.
- The solubility of most solids in water increases with increasing temperature.
- The solubility of gases in liquids generally decreases with increasing temperature, but it increases with increasing pressure.

Concentration Units (13.5)

- Common units used to express solution concentration are molarity (M), molality (m), mole fraction (χ), mole percent (mol %), percent (%) by mass or volume, parts per million (ppm) by mass or volume, and parts per billion (ppb) by mass or volume. These units are summarized in Table 13.5.

Vapor Pressure Lowering, Freezing Point Depression, Boiling Point Elevation, and Osmosis (13.6, 13.7)

- The presence of a nonvolatile solute in a liquid results in a lower vapor pressure of the solution relative to the vapor pressure of the pure liquid. This lower vapor pressure is predicted by Raoult's law for an ideal solution.
- If the solute–solvent interactions are particularly strong, the actual vapor pressure of the solution is lower than that predicted by Raoult's law.
- If the solute–solvent interactions are particularly weak, the actual vapor pressure of the solution is higher than that predicted by Raoult's law.
- The addition of a nonvolatile solute to a liquid results in a solution that has a lower freezing point and a higher boiling point than the pure solvent.
- The flow of solvent from a solution of lower concentration to a solution of higher concentration is osmosis.
- Vapor pressure lowering, freezing point depression, boiling point elevation, and osmosis are colligative properties and depend only on the number of solute particles added, not the type of solute particles.
- Electrolyte solutes have a greater effect on these colligative properties than the corresponding amount of a nonelectrolyte solute as specified by the van't Hoff factor.

KEY EQUATIONS AND RELATIONSHIPS

Henry's Law: Solubility of Gases with Increasing Pressure (13.4)

$$S_{\text{gas}} = k_{\text{H}} P_{\text{gas}} \text{ is Henry's law constant}$$

Molarity (M) of a Solution (13.5)

$$(M) = \frac{\text{amount solute (in mol)}}{\text{volume solution (in L)}}$$

Molality (m) of a Solution (13.5)

$$(m) = \frac{\text{amount solute (in mol)}}{\text{mass solvent (in kg)}}$$

Concentration of a Solution in Parts by Mass and Parts by Volume (13.5)

$$\text{percent by mass} = \frac{\text{mass solute} \times 100\%}{\text{mass solution}}$$

$$\text{parts per million (ppm)} = \frac{\text{mass solute} \times 10^6}{\text{mass solution}}$$

$$\text{parts per billion (ppb)} = \frac{\text{mass solute} \times 10^9}{\text{mass solution}}$$

$$\text{parts by volume} = \frac{\text{volume solute} \times \text{multiplication factor}}{\text{volume solution}}$$

Concentration of a Solution in Mole Fraction (χ) and Mole Percent (13.5)

$$\chi_{\text{solute}} = \frac{n_{\text{solute}}}{n_{\text{solute}} + n_{\text{solvent}}}$$

$$\text{Mol}\% = \chi \times 100\%$$

Raoult's Law: Relationship between the Vapor Pressure of a Solution (P_{solution}), the Mole Fraction of the Solvent (χ_{solvent}), and the Vapor Pressure of the Pure Solvent ($P_{\text{solvent}}^{\circ}$) (13.6)

$$P_{\text{solution}} = \chi_{\text{solvent}} P_{\text{solvent}}^{\circ}$$

The Vapor Pressure of a Solution Containing Two Volatile Components (13.6)

$$P_{\text{A}} = \chi_{\text{A}} P_{\text{A}}^{\circ}$$

$$P_{\text{B}} = \chi_{\text{B}} P_{\text{B}}^{\circ}$$

$$P_{\text{tot}} = P_{\text{A}} + P_{\text{B}}$$

Relationship between Freezing Point Depression (ΔT_{f}), Molality (m), and Freezing Point Depression Constant K_{f} (13.6)

$$\Delta T_{\text{f}} = m \times K_{\text{f}}$$

Relationship between Boiling Point Elevation (ΔT_{b}), Molality (m), and Boiling Point Elevation Constant (K_{b}) (13.6)

$$\Delta T_{\text{b}} = m \times K_{\text{b}}$$

Relationship between Osmotic Pressure (Π), Molarity (m), the Ideal Gas Constant (R), and Temperature (T , in K) (13.6)

$$\Pi = MRT \quad (R = 0.08206 \text{ L} \cdot \text{atm/mol} \cdot \text{K})$$

van't Hoff Factor (i): Ratio of Moles of Particles in Solution to Moles of Formula Units Dissolved (13.7)

$$i = \frac{\text{moles of particles in solution}}{\text{moles of formula units dissolved}}$$

EXERCISES

REVIEW QUESTIONS

1. What is a solution? What are the solute and solvent?
2. What does it mean when we say that a substance is soluble in another substance? Which units do we use to report solubility?
3. Why do two ideal gases thoroughly mix when combined? What drives the mixing?
4. What is entropy? What role does entropy play in the formation of solutions?
5. What kinds of intermolecular forces are involved in solution formation?
6. Explain how the relative strengths of solute–solute interactions, solvent–solvent interactions, and solvent–solute interactions affect solution formation.
7. What does the statement *like dissolves like* mean with respect to solution formation?
8. List the three steps involved in evaluating the enthalpy changes associated with solution formation.
9. What is the heat of hydration ($\Delta H_{\text{hydration}}$)? How does the enthalpy of solution depend on the relative magnitudes of ΔH_{solute} and $\Delta H_{\text{hydration}}$?
10. Explain dynamic equilibrium with respect to solution formation. What is a saturated solution? An unsaturated solution? A supersaturated solution?
11. How does temperature affect the solubility of a solid in a liquid? How is this temperature dependence exploited to purify solids through recrystallization?
12. How does temperature affect the solubility of a gas in a liquid? How does this temperature dependence affect the amount of oxygen available for fish and other aquatic animals?
13. How does pressure affect the solubility of a gas in a liquid? How does this pressure dependence account for the bubbling that occurs upon opening a can of soda?
14. What is Henry's law? For what kinds of calculations is Henry's law useful?
15. What are the common units for expressing solution concentration?
16. How are parts by mass and parts by volume used in calculations?

17. What is the effect of a nonvolatile solute on the vapor pressure of a liquid? Why is the vapor pressure of a solution different from the vapor pressure of the pure liquid solvent?
18. What is Raoult's law? For what kind of calculations is Raoult's law useful?
19. Explain the difference between an ideal and a nonideal solution.
20. What is the effect on vapor pressure of a solution with particularly *strong* solute–solvent interactions? With particularly *weak* solute–solvent interactions?

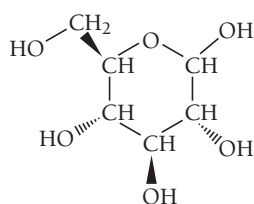
21. Explain why the lower vapor pressure for a solution containing a nonvolatile solute results in a higher boiling point and lower melting point compared to the pure solvent.
22. What are colligative properties?
23. What is osmosis? What is osmotic pressure?
24. Explain the significance of the van't Hoff factor (i) and its role in determining the colligative properties of solutions containing ionic solutes.

PROBLEMS BY TOPIC

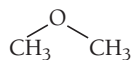
Note: Answers to all odd-numbered Problems, numbered in blue, can be found in Appendix III. Exercises in the Problems by Topic section are paired, with each odd-numbered problem followed by a similar even-numbered problem. Exercises in the Cumulative Problems section are also paired but more loosely. Because of their nature, Challenge Problems and Conceptual Problems are unpaired.

Solubility

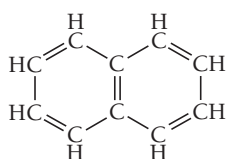
25. Pick an appropriate solvent from Table 13.3 to dissolve each substance. State the kind of intermolecular forces that would occur between the solute and solvent in each case.
 - a. motor oil (nonpolar)
 - b. ethanol (polar, contains an OH group)
 - c. lard (nonpolar)
 - d. potassium chloride (ionic)
26. Pick an appropriate solvent from Table 13.3 to dissolve each substance. State the kind of intermolecular forces that would occur between the solute and solvent in each case.
 - a. isopropyl alcohol (polar, contains an OH group)
 - b. sodium chloride (ionic)
 - c. vegetable oil (nonpolar)
 - d. sodium nitrate (ionic)
27. Which molecule would you expect to be more soluble in water, $\text{CH}_3\text{CH}_2\text{CH}_2\text{CH}_2\text{OH}$ or $\text{HOCH}_2\text{CH}_2\text{CH}_2\text{OH}$?
28. Which molecule would you expect to be more soluble in water, CCl_4 or CH_2Cl_2 ?
29. For each compound, would you expect greater solubility in water or in hexane? Indicate the kinds of intermolecular forces that occur between the solute and the solvent in which the molecule is most soluble.
 - a. glucose
 - b. naphthalene



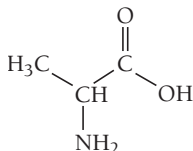
c. dimethyl ether



b. naphthalene

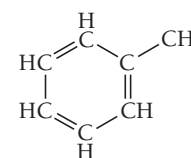


d. alanine (an amino acid)

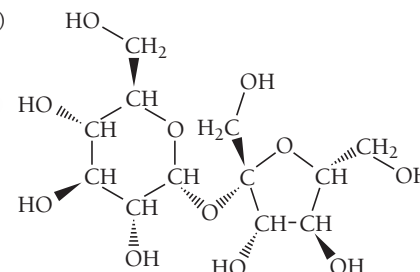


30. For each compound, would you expect greater solubility in water or in hexane? Indicate the kinds of intermolecular forces that would occur between the solute and the solvent in which the molecule is most soluble.

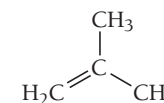
a. toluene



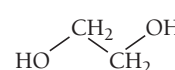
b. sucrose (table sugar)



c. isobutene



d. ethylene glycol



Energetics of Solution Formation

31. When ammonium chloride (NH_4Cl) is dissolved in water, the solution becomes colder.
 - a. Is the dissolution of ammonium chloride endothermic or exothermic?
 - b. What can you conclude about the relative magnitudes of the lattice energy of ammonium chloride and its heat of hydration?
 - c. Sketch a qualitative energy diagram similar to Figure 13.6 for the dissolution of NH_4Cl .
 - d. Why does the solution form? What drives the process?

32. When lithium iodide (LiI) is dissolved in water, the solution becomes hotter.
- Is the dissolution of lithium iodide endothermic or exothermic?
 - What can you conclude about the relative magnitudes of the lattice energy of lithium iodide and its heat of hydration?
 - Sketch a qualitative energy diagram similar to Figure 13.6 for the dissolution of LiI.
 - Why does the solution form? What drives the process?
33. Silver nitrate has a lattice energy of -820 kJ/mol and a heat of solution of -22.6 kJ/mol . Calculate the heat of hydration for silver nitrate.
34. Use the given data to calculate the heats of hydration of lithium chloride and sodium chloride. Which of the two cations, lithium or sodium, has stronger ion–dipole interactions with water? Why?

Compound	Lattice Energy (kJ/mol)	ΔH_{soln} (kJ/mol)
LiCl	−834	−37.0
NaCl	−769	+3.88

35. Lithium iodide has a lattice energy of $-7.3 \times 10^2 \text{ kJ/mol}$ and a heat of hydration of -793 kJ/mol . Find the heat of solution for lithium iodide and determine how much heat is evolved or absorbed when 15.0 g of lithium iodide completely dissolves in water.
36. Potassium nitrate has a lattice energy of -163.8 kcal/mol and a heat of hydration of -155.5 kcal/mol . How much potassium nitrate has to dissolve in water to absorb $1.00 \times 10^2 \text{ kJ}$ of heat?

Solution Equilibrium and Factors Affecting Solubility

37. A solution contains 25 g of NaCl per 100.0 g of water at 25°C . Is the solution unsaturated, saturated, or supersaturated? (Refer to Figure 13.10.)
38. A solution contains 32 g of KNO_3 per 100.0 g of water at 25°C . Is the solution unsaturated, saturated, or supersaturated? (Refer to Figure 13.10.)
39. A KNO_3 solution containing 45 g of KNO_3 per 100.0 g of water is cooled from 40°C to 0°C . What happens during cooling? (Refer to Figure 13.10.)
40. A KCl solution containing 42 g of KCl per 100.0 g of water is cooled from 60°C to 0°C . What happens during cooling? (Refer to Figure 13.10.)
41. Some laboratory procedures involving oxygen-sensitive reactants or products call for using water that has been boiled (and then cooled). Explain.
42. A person preparing a fish tank fills the tank with water that has been boiled (and then cooled). When the person puts fish into the tank, they die. Explain.
43. Scuba divers breathing air at increased pressure can suffer from nitrogen narcosis—a condition resembling drunkenness—when the partial pressure of nitrogen exceeds about 4 atm. What property of gas/water solutions causes this to happen? How can a diver reverse this effect?
44. Scuba divers breathing air at increased pressure can suffer from oxygen toxicity—too much oxygen in their bloodstream—when the partial pressure of oxygen exceeds about 1.4 atm. What happens to the amount of oxygen in a diver's bloodstream when he or she breathes oxygen at elevated pressures? How can this be reversed?
45. Calculate the mass of nitrogen dissolved at room temperature in an 80.0-L home aquarium. Assume a total pressure of 1.0 atm and a mole fraction for nitrogen of 0.78.
46. Use Henry's law to determine the molar solubility of helium at a pressure of 1.0 atm and 25°C .

Concentrations of Solutions

47. An aqueous NaCl solution is made using 112 g of NaCl diluted to a total solution volume of 1.00 L. Calculate the molarity, molality, and mass percent of the solution. (Assume a density of 1.08 g/mL for the solution.)
48. An aqueous KNO_3 solution is made using 72.5 g of KNO_3 diluted to a total solution volume of 2.00 L. Calculate the molarity, molality, and mass percent of the solution. (Assume a density of 1.05 g/mL for the solution.)
49. To what volume should you dilute 50.0 mL of a 5.00-M KI solution so that 25.0 mL of the diluted solution contains 3.05 g of KI?
50. To what volume should you dilute 125 mL of an 8.00-M CuCl_2 solution so that 50.0 mL of the diluted solution contains 4.67 g CuCl_2 ?
51. Silver nitrate solutions are used to plate silver onto other metals. What is the maximum amount of silver (in grams) that can be plated out of 4.8 L of an AgNO_3 solution containing 3.4% Ag by mass? Assume that the density of the solution is 1.01 g/mL.
52. A dioxin-contaminated water source contains 0.085% dioxin by mass. How much dioxin is present in 2.5 L of this water? Assume a density of 1.00 g/mL.
53. A hard-water sample contains 0.0085% Ca by mass (in the form of Ca^{2+} ions). How much water (in grams) contains 1.2 g of Ca? (1.2 g of Ca is the recommended daily allowance of calcium for adults between 19 and 24 years old.)
54. Lead is a toxic metal that affects the central nervous system. A Pb-contaminated water sample contains 0.0011% Pb by mass. How much of the water (in mL) contains 150 mg of Pb? (Assume a density of 1.0 g/mL.)
55. You can purchase nitric acid in a concentrated form that is 70.3% HNO_3 by mass and has a density of 1.41 g/mL. How can you prepare 1.15 L of 0.100 M HNO_3 from the concentrated solution?

56. You can purchase hydrochloric acid in a concentrated form that is 37.0% HCl by mass and that has a density of 1.20 g/mL. How can you prepare 2.85 L of 0.500 M HCl from the concentrated solution?
57. Describe how to prepare each solution from the dry solute and the solvent.
- 1.00×10^2 mL of 0.500 M KCl
 - 1.00×10^2 g of 0.500 *m* KCl
 - 1.00×10^2 g of 5.0% KCl solution by mass
58. Describe how to prepare each solution from the dry solute and the solvent.
- 125 mL of 0.100 M NaNO₃
 - 125 g of 0.100 *m* NaNO₃
 - 125 g of 1.0% NaNO₃ solution by mass
59. A solution is prepared by dissolving 28.4 g of glucose (C₆H₁₂O₆) in 355 g of water. The final volume of the solution is 378 mL. For this solution, calculate the concentration in each unit.
- molarity
 - molality
 - percent by mass
 - mole fraction
 - mole percent
60. A solution is prepared by dissolving 20.2 mL of methanol (CH₃OH) in 100.0 mL of water at 25°C. The final volume of the solution is 118 mL. The densities of methanol and water at this temperature are 0.782 g/mL and 1.00 g/mL, respectively. For this solution, calculate the concentration in each unit.
- molarity
 - molality
 - percent by mass
 - mole fraction
 - mole percent
61. Household hydrogen peroxide is an aqueous solution containing 3.0% hydrogen peroxide by mass. What is the molarity of this solution? (Assume a density of 1.01 g/mL.)
62. One brand of laundry bleach is an aqueous solution containing 4.55% sodium hypochlorite (NaOCl) by mass. What is the molarity of this solution? (Assume a density of 1.02 g/mL.)
63. An aqueous solution contains 36% HCl by mass. Calculate the molality and mole fraction of the solution.
64. An aqueous solution contains 5.0% NaCl by mass. Calculate the molality and mole fraction of the solution.
67. Calculate the vapor pressure of a solution containing 24.5 g of glycerin (C₃H₈O₃) in 135 mL of water at 30.0°C. The vapor pressure of pure water at this temperature is 31.8 torr. Assume that glycerin is not volatile and dissolves molecularly (that is, it is not ionic), and use a density of 1.00 g/mL for the water.
68. A solution contains naphthalene (C₁₀H₈) dissolved in hexane (C₆H₁₄) at a concentration of 12.35% naphthalene by mass. Calculate the vapor pressure at 25°C of hexane above the solution. The vapor pressure of pure hexane at 25°C is 151 torr.
69. A solution contains 50.0 g of heptane (C₇H₁₆) and 50.0 g of octane (C₈H₁₈) at 25°C. The vapor pressures of pure heptane and pure octane at 25°C are 45.8 torr and 10.9 torr, respectively. Assuming ideal behavior, answer each question.
- What is the vapor pressure of each solution component in the mixture?
 - What is the total pressure above the solution?
 - What is the composition of the vapor in mass percent?
 - Why is the composition of the vapor different from the composition of the solution?
70. A solution contains a mixture of pentane and hexane at room temperature. The solution has a vapor pressure of 258 torr. Pure pentane and hexane have vapor pressures of 425 torr and 151 torr, respectively, at room temperature. What is the mole fraction composition of the mixture? (Assume ideal behavior.)
71. A solution contains 4.08 g of chloroform (CHCl₃) and 9.29 g of acetone (CH₃COCH₃). The vapor pressures at 35°C of pure chloroform and pure acetone are 295 torr and 332 torr, respectively. Assuming ideal behavior, calculate the vapor pressures of each component and the total vapor pressure above the solution. The experimentally measured total vapor pressure of the solution at 35°C is 312 torr. Is the solution ideal? If not, what can you say about the relative strength of chloroform–acetone interactions compared to the acetone–acetone and chloroform–chloroform interactions?
72. A solution of methanol and water has a mole fraction of water of 0.312 and a total vapor pressure of 211 torr at 39.9°C. The vapor pressures of pure methanol and pure water at this temperature are 256 torr and 55.3 torr, respectively. Is the solution ideal? If not, what can you say about the relative strengths of the solute–solvent interactions compared to the solute–solute and solvent–solvent interactions?

Vapor Pressure of Solutions

65. A beaker contains 100.0 mL of pure water. A second beaker contains 100.0 mL of seawater. The two beakers are left side by side on a lab bench for one week. At the end of the week, the liquid level in both beakers has decreased. However, the level has decreased more in one of the beakers than in the other. Which one and why?
66. Which solution has the highest vapor pressure?
- 20.0 g of glucose (C₆H₁₂O₆) in 100.0 mL of water
 - 20.0 g of sucrose (C₁₂H₂₂O₁₁) in 100.0 mL of water
 - 10.0 g of potassium acetate KC₂H₃O₂ in 100.0 mL of water

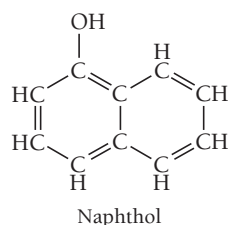
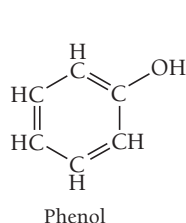
Freezing Point Depression, Boiling Point Elevation, and Osmosis

73. A glucose solution contains 55.8 g of glucose (C₆H₁₂O₆) in 455 g of water. Determine the freezing point and boiling point of the solution. (Assume a density of 1.00 g/mL for water.)
74. An ethylene glycol solution contains 21.2 g of ethylene glycol (C₂H₆O₂) in 85.4 mL of water. Determine the freezing point and boiling point of the solution. (Assume a density of 1.00 g/mL for water.)
75. Calculate the freezing point and melting point of a solution containing 10.0 g of naphthalene (C₁₀H₈) in 100.0 mL of benzene. Benzene has a density of 0.877 g/cm³.

76. Calculate the freezing point and melting point of a solution containing 7.55 g of ethylene glycol ($\text{C}_2\text{H}_6\text{O}_2$) in 85.7 mL of ethanol. Ethanol has a density of 0.789 g/cm^3 .
77. An aqueous solution containing 17.5 g of an unknown molecular (nonelectrolyte) compound in 100.0 g of water has a freezing point of -1.8°C . Calculate the molar mass of the unknown compound.
78. An aqueous solution containing 35.9 g of an unknown molecular (nonelectrolyte) compound in 150.0 g of water has a freezing point of -1.3°C . Calculate the molar mass of the unknown compound.
79. Calculate the osmotic pressure of a solution containing 24.6 g of glycerin ($\text{C}_3\text{H}_8\text{O}_3$) in 250.0 mL of solution at 298 K.
80. What mass of sucrose ($\text{C}_{12}\text{H}_{22}\text{O}_{11}$) would you combine with $5.00 \times 10^2 \text{ g}$ of water to make a solution with an osmotic pressure of 8.55 atm at 298 K? (Assume a density of 1.0 g/mL for the solution.)
81. A solution containing 27.55 mg of an unknown protein per 25.0 mL solution was found to have an osmotic pressure of 3.22 torr at 25°C . What is the molar mass of the protein?
82. Calculate the osmotic pressure of a solution containing 18.75 mg of hemoglobin in 15.0 mL of solution at 25°C . The molar mass of hemoglobin is $6.5 \times 10^4 \text{ g/mol}$.
83. Calculate the freezing point and boiling point of each aqueous solution, assuming complete dissociation of the solute.
- $0.100 \text{ m K}_2\text{S}$
 - 21.5 g of CuCl_2 in $4.50 \times 10^2 \text{ g}$ water
 - 5.5% NaNO_3 by mass (in water)
84. Calculate the freezing point and boiling point in each solution, assuming complete dissociation of the solute.
- 10.5 g FeCl_3 in $1.50 \times 10^2 \text{ g}$ water
 - 3.5% KCl by mass (in water)
 - 0.150 m MgF_2
85. What mass of salt (NaCl) should you add to 1.00 L of water in an ice-cream maker to make a solution that freezes at -10.0°C ? Assume complete dissociation of the NaCl and a density of 1.00 g/mL for water.
86. Determine the required concentration (in percent by mass) for an aqueous ethylene glycol ($\text{C}_2\text{H}_6\text{O}_2$) solution to have a boiling point of 104.0°C .
87. Use the van't Hoff factors in Table 13.7 to calculate each colligative property.
- the melting point of a 0.100-m iron(III) chloride solution
 - the osmotic pressure of a 0.085-M potassium sulfate solution at 298 K
 - the boiling point of a 1.22% by mass magnesium chloride solution
88. Referring to the van't Hoff factors in Table 13.7, calculate the mass of solute required to make each aqueous solution.
- a sodium chloride solution containing $1.50 \times 10^2 \text{ g}$ of water that has a melting point of -1.0°C
 - $2.50 \times 10^2 \text{ mL}$ of a magnesium sulfate solution that has an osmotic pressure of 3.82 atm at 298 K
 - an iron(III) chloride solution containing $2.50 \times 10^2 \text{ g}$ of water that has a boiling point of 102°C
89. A 1.2-m aqueous solution of an ionic compound with the formula MX_2 has a boiling point of 101.4°C . Calculate the van't Hoff factor (i) for MX_2 at this concentration.
90. A 0.95-m aqueous solution of an ionic compound with the formula MX has a freezing point of -3.0°C . Calculate the van't Hoff factor (i) for MX at this concentration.
91. A 0.100-M ionic solution has an osmotic pressure of 8.3 atm at 25°C . Calculate the van't Hoff factor (i) for this solution.
92. A solution contains 8.92 g of KBr in 500.0 mL of solution and has an osmotic pressure of 6.97 atm at 25°C . Calculate the van't Hoff factor (i) for KBr at this concentration.
93. Calculate the vapor pressure at 25°C of an aqueous solution that is 5.50% NaCl by mass. (Assume complete dissociation of the solute.)
94. An aqueous CaCl_2 solution has a vapor pressure of 81.6 mmHg at 50°C . The vapor pressure of pure water at this temperature is 92.6 mmHg. What is the concentration of CaCl_2 in mass percent? (Assume complete dissociation of the solute.)

CUMULATIVE PROBLEMS

95. The solubility of carbon tetrachloride (CCl_4) in water at 25°C is 1.2 g/L. The solubility of chloroform (CHCl_3) at the same temperature is 10.1 g/L. Why is chloroform almost ten times more soluble in water than carbon tetrachloride?
96. The solubility of phenol in water at 25°C is 8.7 g/L. The solubility of naphthol at the same temperature is only 0.074 g/L. Examine the structures of phenol and naphthol shown here and explain why phenol is so much more soluble than naphthol.



97. Potassium perchlorate (KClO_4) has a lattice energy of -599 kJ/mol and a heat of hydration of -548 kJ/mol . Find the heat of solution for potassium perchlorate and determine the temperature change that occurs when 10.0 g of potassium perchlorate is dissolved with enough water to make 100.0 mL of solution. (Assume a heat capacity of $4.05 \text{ J/g} \cdot ^\circ\text{C}$ for the solution and a density of 1.05 g/mL .)
98. Sodium hydroxide (NaOH) has a lattice energy of -887 kJ/mol and a heat of hydration of -932 kJ/mol . How much solution could be heated to boiling by the heat evolved by the dissolution of 25.0 g of NaOH ? (For the solution, assume a heat capacity of $4.0 \text{ J/g} \cdot ^\circ\text{C}$, an initial temperature of 25.0°C , a boiling point of 100.0°C , and a density of 1.05 g/mL .)
99. A saturated solution forms when 0.0537 L of argon, at a pressure of 1.0 atm and temperature of 25°C , is dissolved in 1.0 L of water. Calculate the Henry's law constant for argon.

100. A gas has a Henry's law constant of 0.112 M/atm. What total volume of solution is needed to completely dissolve 1.65 L of the gas at a pressure of 725 torr and a temperature of 25°C?
101. The Safe Drinking Water Act (SDWA) sets a limit for mercury—a toxin to the central nervous system—at 0.0020 ppm by mass. Water suppliers must periodically test their water to ensure that mercury levels do not exceed this limit. Suppose water becomes contaminated with mercury at twice the legal limit (0.0040 ppm). How much of this water would a person have to consume to ingest 50.0 mg of mercury?
102. Water softeners often replace calcium ions in hard water with sodium ions. Because sodium compounds are soluble, the presence of sodium ions in water does not cause the white, scaly residues caused by calcium ions. However, calcium is more beneficial to human health than sodium because calcium is a necessary part of the human diet, while high levels of sodium intake are linked to increases in blood pressure. The U.S. Food and Drug Administration (FDA) recommends that adults ingest less than 2.4 g of sodium per day. How many liters of softened water, containing a sodium concentration of 0.050% sodium by mass, does a person have to consume to exceed the FDA recommendation? (Assume a water density of 1.0 g/mL.)
103. An aqueous solution contains 12.5% NaCl by mass. What mass of water (in grams) is contained in 2.5 L of the vapor above this solution at 55°C? The vapor pressure of pure water at 55°C is 118 torr. (Assume complete dissociation of NaCl.)
104. The vapor above an aqueous solution contains 19.5 mg water per liter at 25°C. Assuming ideal behavior, what is the concentration of the solute within the solution in mole percent?
105. What is the freezing point of an aqueous solution that boils at 106.5°C?
106. What is the boiling point of an aqueous solution that has a vapor pressure of 20.5 torr at 25°C? (Assume a nonvolatile solute.)
107. An isotonic solution contains 0.90% NaCl mass to volume. Calculate the percent mass to volume for isotonic solutions containing each solute at 25°C. Assume a van't Hoff factor of 1.9 for all ionic solutes.
- KCl
 - NaBr
 - glucose(C₆H₁₂O₆)
108. Magnesium citrate, Mg₃(C₆H₅O₇)₂, belongs to a class of laxatives called *hyperosmotics*, which cause rapid emptying of the bowel. When a person consumes a concentrated solution of magnesium citrate, it passes through the intestines, drawing water and promoting diarrhea, usually within 6 hours. Calculate the osmotic pressure of a magnesium citrate laxative solution containing 28.5 g of magnesium citrate in 235 mL of solution at 37°C (approximate body temperature). Assume complete dissociation of the ionic compound.
109. A solution is prepared from 4.5701 g of magnesium chloride and 43.238 g of water. The vapor pressure of water above this solution is 0.3624 atm at 348.0 K. The vapor pressure of pure water at this temperature is 0.3804 atm. Find the value of the van't Hoff factor (i) for magnesium chloride in this solution.
110. When HNO₂ dissolves in water, it partially dissociates according to the equation $\text{HNO}_2(aq) \rightleftharpoons \text{H}^+(aq) + \text{NO}_2^-(aq)$. A solution contains 7.050 g of HNO₂ in 1.000 kg of water. Its freezing point is -0.2929°C. Calculate the fraction of HNO₂ that has dissociated.
111. A solution of a nonvolatile solute in water has a boiling point of 375.3 K. Calculate the vapor pressure of water above this solution at 338 K. The vapor pressure of pure water at this temperature is 0.2467 atm.
112. The density of a 0.438-M solution of potassium chromate (K₂CrO₄) at 298 K is 1.063 g/mL. Calculate the vapor pressure of water above the solution. The vapor pressure of pure water at this temperature is 0.0313 atm. (Assume complete dissociation of the solute.)
113. The vapor pressure of carbon tetrachloride, CCl₄, is 0.354 atm, and the vapor pressure of chloroform, CHCl₃, is 0.526 atm at 316 K. A solution is prepared from equal masses of these two compounds at this temperature. Calculate the mole fraction of the chloroform in the vapor above the solution. If the vapor above the original solution is condensed and isolated into a separate flask, what would the vapor pressure of chloroform be above this new solution?
114. Distillation is a method of purification based on successive separations and recondensations of vapor above a solution. Use the result of the previous problem to calculate the mole fraction of chloroform in the vapor above a solution obtained by three successive separations and condensations of the vapors above the original solution of carbon tetrachloride and chloroform. Show how this result supports the use of distillation as a separation method.
115. A solution of 49.0% H₂SO₄ by mass has a density of 1.39 g/cm³ at 293 K. A 25.0 cm³ sample of this solution is mixed with enough water to increase the volume of the solution to 99.8 cm³. Find the molarity of sulfuric acid in this solution.
116. Find the mass of urea (CH₄N₂O) needed to prepare 50.0 g of a solution in water in which the mole fraction of urea is 0.0770.
117. A solution contains 10.05 g of unknown compound dissolved in 50.0 mL of water. (Assume a density of 1.00 g/mL for water.) The freezing point of the solution is -3.16°C. The mass percent composition of the compound is 60.97% C, 11.94% H, and the rest is O. What is the molecular formula of the compound?
118. The osmotic pressure of a solution containing 2.10 g of an unknown compound dissolved in 175.0 mL of solution at 25°C is 1.93 atm. The combustion of 24.02 g of the unknown compound produced 28.16 g CO₂ and 8.64 g H₂O. What is the molecular formula of the compound (which contains only carbon, hydrogen, and oxygen)?
119. A 100.0-mL aqueous sodium chloride solution is 13.5% NaCl by mass and has a density of 1.12 g/mL. What would you add (solute or solvent) and what mass of it to make the boiling point of the solution 104.4°C? (Use *i* = 1.8 for NaCl.)
120. A 50.0-mL solution is initially 1.55% MgCl₂ by mass and has a density of 1.05 g/mL. What is the freezing point of the solution after you add an additional 1.35 g MgCl₂? (Use *i* = 2.5 for MgCl₂.)

CHALLENGE PROBLEMS

121. The small bubbles that form on the bottom of a water pot that is being heated (before boiling) are due to dissolved air coming out of solution. Use Henry's law and the solubilities given to calculate the total volume of nitrogen and oxygen gas that should bubble out of 1.5 L of water upon warming from 25°C to 50°C. Assume that the water is initially saturated with nitrogen and oxygen gas at 25°C and a total pressure of 1.0 atm. Assume that the gas bubbles out at a temperature of 50°C. The solubility of oxygen gas at 50°C is 27.8 mg/L at an oxygen pressure of 1.00 atm. The solubility of nitrogen gas at 50°C is 14.6 mg/L at a nitrogen pressure of 1.00 atm. Assume that the air above the water contains an oxygen partial pressure of 0.21 atm and a nitrogen partial pressure of 0.78 atm.
122. The vapor above a mixture of pentane and hexane at room temperature contains 35.5% pentane by mass. What is the mass percent composition of the solution? Pure pentane and hexane have vapor pressures of 425 torr and 151 torr, respectively, at room temperature.
123. A 1.10-g sample contains only glucose ($\text{C}_6\text{H}_{12}\text{O}_6$) and sucrose ($\text{C}_{12}\text{H}_{22}\text{O}_{11}$). When the sample is dissolved in water to a total solution volume of 25.0 mL, the osmotic pressure of the solution is 3.78 atm at 298 K. What is the mass percent composition of glucose and sucrose in the sample?
124. A solution is prepared by mixing 631 mL of methanol with 501 mL of water. The molarity of methanol in the resulting solution is 14.29 M. The density of methanol at this temperature is 0.792 g/mL. Calculate the difference in volume between this solution and the total volume of water and methanol that were mixed to prepare the solution.
125. Two alcohols, isopropyl alcohol and propyl alcohol, have the same molecular formula, $\text{C}_3\text{H}_8\text{O}$. A solution of the two that is two-thirds by mass isopropyl alcohol has a vapor pressure of 0.110 atm at 313 K. A solution that is one-third by mass isopropyl alcohol has a vapor pressure of 0.089 atm at 313 K. Calculate the vapor pressure of each pure alcohol at this temperature. Explain the difference given that the formula of propyl alcohol is $\text{CH}_3\text{CH}_2\text{CH}_2\text{OH}$ and that of isopropyl alcohol is $(\text{CH}_3)_2\text{CHOH}$.
126. A metal, M, of atomic mass 96 amu reacts with fluorine to form a salt that can be represented as MF_x . In order to determine x and therefore the formula of the salt, a boiling point elevation experiment is performed. A 9.18-g sample of the salt is dissolved in 100.0 g of water, and the boiling point of the solution is found to be 374.38 K. Find the formula of the salt. (Assume complete dissociation of the salt in solution.)
127. Sulfuric acid in water dissociates completely into H^+ and HSO_4^- ions. The HSO_4^- ion dissociates to a limited extent into H^+ and SO_4^{2-} . The freezing point of a 0.1000- m solution of sulfuric acid in water is 272.76 K. Calculate the molality of SO_4^{2-} in the solution, assuming ideal solution behavior.
128. A solution of 75.0 g of benzene (C_6H_6) and 75.0 g of toluene (C_7H_8) has a total vapor pressure of 80.9 mmHg at 303 K. Another solution of 100.0-g benzene and 50.0-g toluene has a total vapor pressure of 93.9 mmHg at this temperature. Find the vapor pressure of pure benzene and pure toluene at 303 K. (Assume ideal solutions.)
129. A solution is prepared by dissolving 11.60 g of a mixture of sodium carbonate and sodium bicarbonate in 1.00 L of water. A 300.0 cm^3 sample of the solution is treated with excess HNO_3 and boiled to remove all the dissolved gas. A total of 0.940 L of dry CO_2 is collected at 298 K and 0.972 atm. Find the molarity of the carbonate and bicarbonate in the solution.

CONCEPTUAL PROBLEMS

130. Substance A is a nonpolar liquid and has only dispersion forces among its constituent particles. Substance B is also a nonpolar liquid and has about the same magnitude of dispersion forces among its constituent particles as substance A. When substance A and B are combined, they spontaneously mix.
 - a. Why do the two substances mix?
 - b. Predict the sign and magnitude of ΔH_{soln} .
 - c. Determine the signs and relative magnitudes of ΔH_{solute} , $\Delta H_{\text{solvent}}$, and ΔH_{mix} .
131. A power plant built on a river uses river water as a coolant. The water is warmed as it is used in heat exchangers within the plant. Should the warm water be immediately cycled back into the river? Why or why not?
132. The vapor pressure of a 1-M ionic solution is different from the vapor pressure of a 1-M nonelectrolyte solution. In both cases, the solute is nonvolatile. Which set of diagrams best represents the differences between the two solutions and their vapors?

Figure 1 consists of four panels (a, b, c, d) showing the distribution of solvent (blue) and solute (red) particles between a gas phase (top) and a liquid phase (bottom). The legend indicates that blue spheres represent solvent particles and red spheres represent solute particles.

- Panel (a):** Non-ionic solute. The liquid phase contains a low concentration of red solute particles.
- Panel (b):** Ionic solute. The liquid phase contains a higher concentration of red solute particles.
- Panel (c):** Non-ionic solute. The liquid phase contains a low concentration of red solute particles.
- Panel (d):** Ionic solute. The liquid phase contains a higher concentration of red solute particles.

133. If each substance listed here costs the same amount per kilogram, which would be most cost-effective as a way to lower the freezing point of water? (Assume complete dissociation for all ionic compounds.) Explain.
- $\text{HOCH}_2\text{CH}_2\text{OH}$
 - NaCl
 - KCl
 - MgCl_2
 - SrCl_2

134. A helium balloon inflated on one day falls to the ground the next day. The volume of the balloon decreases somewhat overnight but not by enough to explain why it no longer floats. (If you inflate a new balloon with helium to the same size as the balloon that fell to the ground, the newly inflated balloon floats.) Explain.

QUESTIONS FOR GROUP WORK

Active Classroom Learning

Discuss these questions with the group and record your consensus answer.

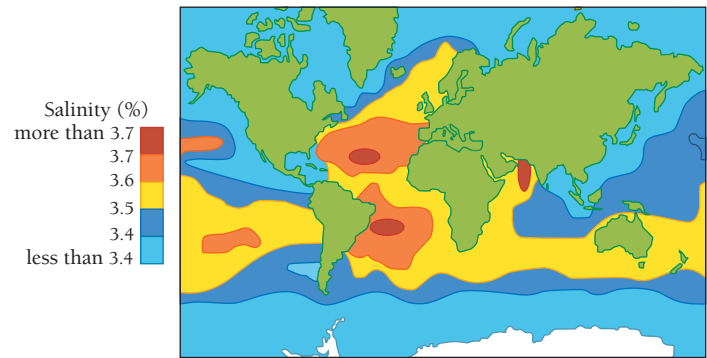
135. Explain why 1-propanol ($\text{CH}_3\text{CH}_2\text{CH}_2\text{OH}$) is miscible in both water (H_2O) and hexane (C_6H_6) when hexane and water are barely soluble in each other.
136. Have each group member make a flashcard with one of the following on the front: ΔH_{soln} , $\Delta H_{\text{lattice}}$, $\Delta H_{\text{solvent}}$, ΔH_{mix} , and $\Delta H_{\text{hydration}}$. On the back of the card, each group member should describe (in words) the ΔH process his or her card lists and how that ΔH relates to other ΔH values mathematically. Each member then presents his or her ΔH to the group. After everyone has presented, members should trade cards and quiz each other.
137. Complete the table by adding *increases*, *decreases*, or *no effect*:

	Increasing Temperature	Increasing Pressure
Solubility of gas in water		
Solubility of a solid in water		

138. When 13.62 g (about one tablespoon) of table sugar (sucrose, $\text{C}_{12}\text{H}_{22}\text{O}_{11}$) is dissolved in 241.5 mL of water (density 0.997 g/mL), the final volume is 250.0 mL (about one cup). Have each group member calculate one of the following for the solution, and present his or her answer to the group:
- mass percent
 - molarity
 - molality
139. Calculate the expected boiling and freezing points for the solution in the previous problem. If you had to bring this syrup to the boiling point for a recipe, would you expect it to take much more time than it takes to boil the same amount of pure water? Why or why not? Would the syrup freeze in a typical freezer ($-18\text{ }^\circ\text{C}$)? Why or why not?

DATA INTERPRETATION AND ANALYSIS

140. The salinity of seawater can vary in the world's oceans as shown in the map, which indicates salinity in units of percent by mass NaCl . Examine the image and answer the questions.



▲ Salinity of Seawater

- Which regions of the globe generally have higher salinity? Lower salinity? State your answer as a general trend in the salinity of seawater.
- Speculate on possible reasons for the trend you observed in part a.
- Calculate the freezing point of a sample of seawater taken from the middle of the Atlantic Ocean. Use a van't Hoff factor of 1.9 for your calculation.
- Make a graph of the freezing point of the seawater versus salinity for the range of salinities in the world's oceans.

ANSWERS TO CONCEPTUAL CONNECTIONS

- Cc 13.1 The first alcohol on the list is methanol, which is highly polar and forms hydrogen bonds with water. It is miscible in water and has only limited solubility in hexane, which is nonpolar. However, as the carbon chain gets longer in the series of alcohols, the OH group becomes less important relative to the growing nonpolar carbon chain. Therefore, the alcohols become progressively less soluble in water and more soluble in hexane. This table demonstrates the rule of thumb *like dissolves like*. Methanol is like water and therefore dissolves in water. It is unlike hexane and therefore has limited solubility in hexane. As you move down the list, the alcohols become increasingly like hexane and increasingly unlike water and therefore become increasingly soluble in hexane and increasingly insoluble in water.
- Cc 13.2 You can conclude that $|\Delta H_{\text{solute}}| < |\Delta H_{\text{hydration}}|$. Because ΔH_{soln} is negative, the absolute value of the negative term ($\Delta H_{\text{hydration}}$) must be greater than the absolute value of the positive term (ΔH_{solute}).
- Cc 13.3 (b) Some potassium bromide precipitates out of solution. The solubility of most solids decreases with decreasing temperature. However, the solubility of gases increases with decreasing temperature. Therefore, the nitrogen becomes more soluble and will not bubble out of solution.
- Cc 13.4 Ammonia is the only compound on the list that is polar, so we would expect its solubility in water to be greater than those of the other gases (which are all nonpolar).
- Cc 13.5 The solution has a molality of 10.0 *m*. You combined 1.00 mol of solute with 0.100 kg of solvent, so the molality is $1.00 \text{ mol}/0.100 \text{ kg} = 10.0 \text{ m}$.
- Cc 13.6 The solute–solvent interactions must be stronger than the solute–solute and solvent–solvent interactions. The stronger interactions lower the vapor pressure from the expected ideal value of 150 mmHg.
- Cc 13.7 Solution B because K_b for ethanol is greater than K_b for water.
- Cc 13.8 (c) The 0.50-M MgCl_2 solution has the highest boiling point because it has the highest concentration of particles. We expect 1 mol of MgCl_2 to form 3 mol of particles in solution (although it effectively forms slightly fewer).

14.1 Catching Lizards 585

14.2 Rates of Reaction and the Particulate Nature of Matter 586

14.3 Defining and Measuring the Rate of a Chemical Reaction 587

14.4 The Rate Law: The Effect of Concentration on Reaction Rate 593

14.5 The Integrated Rate Law: The Dependence of Concentration on Time 598

14.6 The Effect of Temperature on Reaction Rate 606

14.7 Reaction Mechanisms 613

14.8 Catalysis 618

Key Learning Outcomes 624



Pouring ice water on a lizard slows the lizard down, making it easier to catch.

CHAPTER

14

Chemical Kinetics

I**N THE PASSAGE QUOTED** in this chapter opener, Oxford chemistry professor Sir Cyril Hinshelwood calls attention to an aspect of chemistry often overlooked by the casual observer—the mystery of change with time. Since the opening chapter of this book, you have learned that the goal of chemistry is to understand the macroscopic world by examining the structure of the particles that compose it. In this chapter, we focus on understanding how these particles change with time, an area of study called chemical kinetics. The particulate world is anything but static. Thermal energy produces constant molecular motion, causing molecules to repeatedly collide with one another. In a tiny fraction of these collisions, something extraordinary happens—the electrons on one molecule or atom are attracted to the nuclei of another molecule or atom. Some bonds weaken and new bonds form—a chemical reaction occurs. Chemical kinetics is the study of how these kinds of changes occur in time.

“Nobody, I suppose, could devote many years to the study of chemical kinetics without being deeply conscious of the fascination of time and change: this is something that goes outside science into poetry.”

—Sir Cyril N. Hinshelwood (1897–1967)

14.1 Catching Lizards

The children who live in my neighborhood (including my own kids) have a unique way of catching lizards. Armed with cups of ice water, they chase one of these cold-blooded reptiles into a corner, take aim, and pour the cold water directly onto the lizard's body. The lizard's body temperature drops, and it becomes virtually immobilized—easy prey for little hands. The kids scoop up the lizard and place it in a tub filled with sand and leaves. They then watch as the lizard warms back up and becomes active again. They usually release the lizard back into the yard within hours. I guess you could call them catch-and-release lizard hunters.

Unlike mammals, which actively regulate their body temperature through metabolic activity, lizards are *ectotherms*—their body temperature depends on their surroundings. When splashed with cold water, a lizard's body gets colder. The drop in body temperature immobilizes the lizard because its movement

depends on chemical reactions that occur within its muscles, and the *rates* of those reactions—how fast they occur—are highly sensitive to temperature. In other words, when the temperature drops, the reactions that produce movement in the lizard occur more slowly; therefore, the movement itself slows down. When reptiles get cold, they become lethargic, unable to move very quickly. For this reason, reptiles try to maintain their body temperature within a narrow range by moving between sun and shade.

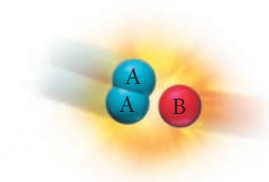
The ability to understand and control reaction rates is important not only to reptile movement but to many other phenomena as well. For example, a successful rocket launch depends on the rate at which fuel burns—too quickly and the rocket can explode, too slowly and it will not leave the ground. Chemists must always consider reaction rates when synthesizing compounds. No matter how stable a compound might be, its synthesis is impossible if the rate at which it forms is too slow. As we have seen with reptiles, reaction rates are important to life. The human body's ability to switch a specific reaction on or off at a specific time is achieved largely by controlling the rate of that reaction through the use of enzymes (biological molecules that we explore more fully in Section 14.8). Knowledge of reaction rates is not only practically important—giving us the ability to control how fast a reaction occurs—but also theoretically important. As you will see in Section 14.7, the rate of a reaction can tell us much about how the reaction occurs on the molecular scale.

14.2 Rates of Reaction and the Particulate Nature of Matter

We have seen throughout this book that matter is composed of particles (atoms, ions, and molecules). The simplest way to begin to understand the factors that influence a reaction rate is to think of a chemical reaction as the result of a collision between these particles. This is the basis of *the collision model*, which we cover in more detail in Section 14.6. For example, consider the following simple generic reaction occurring in the gaseous state:



According to the collision model, the reaction occurs as a result of a collision between A-A particles and B particles.



The rate at which the reaction occurs—that is, how many particles react per unit time—depends on several factors: (a) the concentration of the reacting particles; (b) the temperature; and (c) the structure and relative orientation of the reacting particles. We examine each of these individually.

The Concentration of the Reactant Particles

We saw in Chapter 10 that we can model a gas as a collection of particles in constant motion. The particles frequently collide with one another and with the walls of their container. The greater the number of particles in a given volume—that is, the greater their *concentration*—the greater the number of collisions per unit time. Since a chemical reaction requires a collision between particles, the rate of the reaction depends on the concentration of the particles.

The first person to accurately measure this effect was Ludwig Wilhelmy (1812–1864). In 1850, he measured how fast sucrose, upon treatment with acid, hydrolyzed (broke apart) into glucose and fructose. This reaction occurred over several hours, and Wilhelmy was able to show how the rate depended on the initial amount of sugar present—the greater the initial amount, the faster the initial rate. We more thoroughly examine the relationship between reaction rate and reactant concentration in Section 14.4.

The Temperature of the Reactant Mixture

We saw in Section 14.1 that chemical reactions generally occur faster with increasing temperature. We can understand this behavior based on particle collisions. Let's return to our simple generic reaction:



When B reacts with A-A, the A-A bond breaks and a new bond forms between A and B. *The initial breaking of the A-A bond, however, requires energy*, and even though the forming of A-B gives off energy, some energy, called the *activation energy*, is required to get the reaction started. The energy needed to begin to break the A-A bond can come from the kinetic energy of the colliding particles. In other words, the reaction between A-A and B can occur if there is enough energy in the collision to begin to break the A-A bond.

Recall from Section 10.2 that the average kinetic energy of a gas increases with increasing temperature. At low temperatures, very few of the particle collisions occur with enough energy to begin to break the A-A bond, so the reaction rate is slow. At high temperatures, many particle collisions occur with enough energy to begin to break the A-A bond, and the reaction rate is fast. Therefore, reaction rate increases with increasing temperature. We more thoroughly examine the relationship between reaction rate and temperature in Section 14.6.

The Structure and Orientation of the Colliding Particles

The rates of chemical reactions also depend on the *structure* and relative *orientation* of the colliding particles. We can understand this behavior by comparing two simple reactions:



In the first reaction, B can collide with A-A from either side and result in a reaction. In the second reaction, however, B must collide with A-X only from one side (the A side). If B collides with A-X on the X side, the reaction cannot occur because B must form a bond with A, not X. As a result, in the second reaction many of the collisions that occur, even if they occur with enough kinetic energy, will not result in a reaction because the orientation of the colliding particles is not correct. In this way, the structure of the reactant particles influences the rate of the reaction. All other factors being equal, we expect the first reaction to occur with a faster rate than the second one. We examine examples of the structure dependence of reaction rates in Section 14.6.

Particle Collisions and Reaction Rates

According to the collision model, why does increasing the temperature increase the rate of a reaction?

- Increasing the temperature causes more of the collisions to occur with the correct particle orientation for the reaction to occur.
- Increasing the temperature increases the number of collisions that can occur with enough energy for the reaction to occur.
- Increasing the temperature causes more particles to occupy the same amount of space, which therefore increases the reaction rate.


14.1

Cc

Conceptual
Connection

14.3 Defining and Measuring the Rate of a Chemical Reaction

The rate of a chemical reaction is a measure of how fast the reaction occurs, as shown in **Figure 14.1** ► on the next page. If a chemical reaction has a fast rate, a large fraction of molecules reacts to form products in a given period of time. If a chemical reaction has a slow rate, a relatively small fraction of molecules reacts to form products in a given period of time.

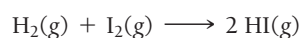
► **FIGURE 14.1** The Rate of a Chemical Reaction

Defining Reaction Rate

When we measure how fast something occurs, or more specifically the *rate* at which it occurs, we usually express the measurement as a change in some quantity per unit of time. For example, we measure the speed of a car—the rate at which it travels—in *miles per hour*, and we might measure how fast people lose weight in *pounds per week*. We report these rates in units that represent the change in what we are measuring (distance or weight) divided by the change in time:

$$\text{speed} = \frac{\text{change in distance}}{\text{change in time}} = \frac{\Delta x}{\Delta t} \qquad \text{weight loss} = \frac{\text{change in weight}}{\text{change in time}} = \frac{\Delta \text{weight}}{\Delta t}$$

Similarly, the rate of a chemical reaction is measured as a change in the amounts of reactants or products (usually in concentration units) divided by the change in time. For example, consider the gas-phase reaction between $\text{H}_2(\text{g})$ and $\text{I}_2(\text{g})$:



We can define the rate of this reaction in the time interval t_1 to t_2 as follows:

$$\text{rate} = -\frac{\Delta[\text{H}_2]}{\Delta t} = -\frac{[\text{H}_2]_{t_2} - [\text{H}_2]_{t_1}}{t_2 - t_1} \quad [14.1]$$

Recall that $[\text{A}]$ means the concentration of A in M (mol/L).

In this expression, $[\text{H}_2]_{t_2}$ is the hydrogen concentration at time t_2 and $[\text{H}_2]_{t_1}$ is the hydrogen concentration at time t_1 . We define the reaction rate as *the negative* of the change in concentration of a reactant divided by the change in time. The negative sign is usually part of the definition when we define the reaction rate in terms of a reactant because reactant concentrations decrease as a reaction proceeds; therefore, *the change in the concentration of a reactant is negative*. The negative sign thus makes the overall rate positive. (By convention, reaction rates are reported as positive quantities.)

We can also define the reaction rate in terms of the other reactant as follows:

$$\text{rate} = -\frac{\Delta[\text{I}_2]}{\Delta t} \quad [14.2]$$

Because 1 mol of H_2 reacts with 1 mol of I_2 , the rates are defined in the same way. We can also define the rate with respect to the *product* of the reaction as follows:

$$\text{rate} = +\frac{1}{2} \frac{\Delta[\text{HI}]}{\Delta t} \quad [14.3]$$

Because product concentrations *increase* as the reaction proceeds, the change in concentration of a product is positive. Therefore, when we define the rate with respect to a product, we do not include a negative sign in the definition—the rate is naturally positive. The factor of $\frac{1}{2}$ in this definition is related to the stoichiometry of the reaction. In order to have a single rate for the entire reaction, the definition of the rate with respect to each reactant and product must reflect the stoichiometric coefficients of the reaction. For this particular reaction, 2 mol of HI are produced from 1 mol of H_2 and 1 mol of I_2 .



The concentration of HI increases at twice the rate that the concentration of H_2 or I_2 decreases. In other words, if 100 I_2 molecules react per second, then 200 HI molecules form per second. In order for the overall rate to have the same value when defined with respect to any of the reactants or products, the change in HI concentration must be multiplied by a factor of one-half.

Consider the graph shown in **Figure 14.2**, which represents the changes in concentration for H_2 (one of the reactants) and HI (the product) versus time. Let's examine several features of this graph individually.

Change in Reactant and Product Concentrations The reactant concentration, as expected, *decreases* with time because reactants are consumed in a reaction. The product concentration *increases* with time because products are formed in a reaction. The increase in HI concentration occurs at exactly twice the rate of the decrease in H_2 concentration because of the stoichiometry of the reaction: 2 mol of HI form for every 1 mol of H_2 consumed.

The Average Rate of the Reaction We can calculate the average rate of the reaction for any time interval using Equation 14.1 for H_2 . The table lists the H_2 concentration ($[\text{H}_2]$) at various times, the change in H_2 concentration for each interval ($\Delta[\text{H}_2]$), the change in time for each interval (Δt), and the rate for each interval ($-\Delta[\text{H}_2]/\Delta t$). The rate is the average rate within the given time interval. For example, the average rate of the reaction in the time interval between 10 and 20 seconds is

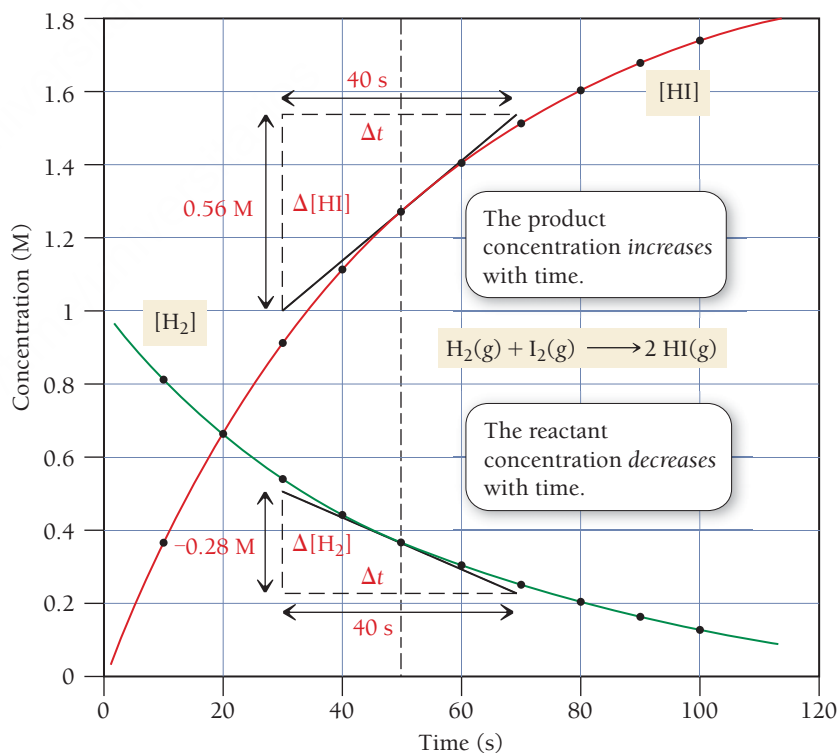


FIGURE 14.2 Reactant and Product Concentrations as a Function of Time The graph shows the concentration of one of the reactants (H_2) and the product (HI) as a function of time. The other reactant (I_2) is omitted for clarity.

0.0149 M/s, while the average rate in the time interval between 20 and 30 seconds is 0.0121 M/s. Notice that the average rate *decreases* as the reaction progresses. In other words, the reaction slows down as it proceeds, because for most reactions, the rate depends on the concentrations of the reactants. As the reactants transform to products, their concentrations decrease, and the reaction slows down.

Time (s)	[H ₂] (M)	Δ[H ₂] (M)	Δt(s)	Rate = -Δ[H ₂]/Δt (M/s)
0.000	1.000	-0.181	10.000	0.0181
10.000	0.819			
20.000	0.670	-0.149	10.000	0.0149
30.000	0.549			
40.000	0.449	-0.121	10.000	0.0121
50.000	0.368			
60.000	0.301	-0.100	10.000	0.0100
70.000	0.247			
80.000	0.202	-0.081	10.000	0.0081
90.000	0.165			
100.000	0.135	-0.067	10.000	0.0067
		-0.054	10.000	0.0054
		-0.045	10.000	0.0045
		-0.037	10.000	0.0037
		-0.030	10.000	0.0030

The Instantaneous Rate of the Reaction The instantaneous rate of the reaction is the rate at any one point in time. We can determine the instantaneous rate by calculating the slope of the tangent to the curve at the point of interest. In Figure 14.2, we have drawn the tangent lines for both [H₂] and [HI] at 50 seconds and have labeled the changes in H₂ concentration (Δ[H₂]) and the changes in time (Δt) corresponding to the tangent line. As you can see from the graph, Δ[H₂] = -0.28 M and Δt = 40 s. We calculate the instantaneous rate at 50 seconds by substituting these values into the expression for rate.

Using [H₂]:

$$\text{instantaneous rate (at 50 s)} = -\frac{\Delta[\text{H}_2]}{\Delta t} = -\frac{-0.28 \text{ M}}{40 \text{ s}} = 0.0070 \text{ M/s}$$

For [HI], Δ[HI] = +0.56 M and Δt = 40 s:

$$\text{instantaneous rate (at 50 s)} = +\frac{1}{2} \frac{\Delta[\text{HI}]}{\Delta t} = +\frac{1}{2} \frac{0.56 \text{ M}}{40 \text{ s}} = 0.0070 \text{ M/s}$$

As we would expect, the rate is the same whether we use one of the reactants or the product for the calculation. Notice that the instantaneous rate at 50 seconds (0.0070 M/s) is between the average rates calculated for the 10-second intervals just before and just after 50 seconds.

We can generalize our definition of reaction rate for the generic reaction:



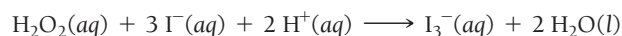
where A and B are reactants, C and D are products, and *a*, *b*, *c*, and *d* are the stoichiometric coefficients. We define the rate of the reaction as follows:

$$\text{rate} = -\frac{1}{a} \frac{\Delta[\text{A}]}{\Delta t} = -\frac{1}{b} \frac{\Delta[\text{B}]}{\Delta t} = +\frac{1}{c} \frac{\Delta[\text{C}]}{\Delta t} = +\frac{1}{d} \frac{\Delta[\text{D}]}{\Delta t} \quad [14.5]$$

From the definition, we can see that knowing the rate of change in the concentration of any one reactant or product at a point in time allows us to determine the rate of change in the concentration of any other reactant or product at that point in time (from the balanced equation). *However, predicting the rate at some future time is not possible from just the balanced equation.*

EXAMPLE 14.1**Expressing Reaction Rates**

Consider this balanced chemical equation:



In the first 10.0 seconds of the reaction, the concentration of I^- drops from 1.000 M to 0.868 M.

- Calculate the average rate of this reaction in this time interval.
- Determine the rate of change in the concentration of H^+ (that is, $\Delta[\text{H}^+]/\Delta t$) during this time interval.

SOLUTION

<p>(a) Use Equation 14.5 to calculate the average rate of the reaction. Since the stoichiometric coefficient is 3, the multiplication factor is 1/3.</p>	$\begin{aligned}\text{rate} &= -\frac{1}{3} \frac{\Delta[\text{I}^-]}{\Delta t} \\ &= -\frac{1}{3} \frac{[\text{I}^-]_{\text{final}} - [\text{I}^-]_{\text{initial}}}{t_{\text{final}} - t_{\text{initial}}} \\ &= -\frac{1}{3} \frac{(0.868 \text{ M} - 1.000 \text{ M})}{(10.0 \text{ s} - 0.00 \text{ s})} \\ &= 4.40 \times 10^{-3} \text{ M/s}\end{aligned}$
<p>(b) Use Equation 14.5 again to determine the relationship between the rate of the reaction and $\Delta[\text{H}^+]/\Delta t$. Since the stoichiometric coefficient is 2, the multiplication factor is 1/2. After solving for $\Delta[\text{H}^+]/\Delta t$, substitute the calculated rate from part (a) and calculate $\Delta[\text{H}^+]/\Delta t$.</p>	$\begin{aligned}\text{rate} &= -\frac{1}{2} \frac{\Delta[\text{H}^+]}{\Delta t} \\ \frac{\Delta[\text{H}^+]}{\Delta t} &= -2(\text{rate}) \\ &= -2(4.40 \times 10^{-3} \text{ M/s}) \\ &= -8.80 \times 10^{-3} \text{ M/s}\end{aligned}$

FOR PRACTICE 14.1

For the reaction shown in Example 14.1, predict the rate of change in concentration of H_2O_2 ($\Delta[\text{H}_2\text{O}_2]/\Delta t$) and I_3^- ($\Delta[\text{I}_3^-]/\Delta t$) during this time interval.

Reaction Rates

For the reaction $\text{A} + 2 \text{B} \longrightarrow \text{C}$ under a given set of conditions, the rate is 0.100 M/s. What is $\Delta[\text{B}]/\Delta t$ under the same conditions?

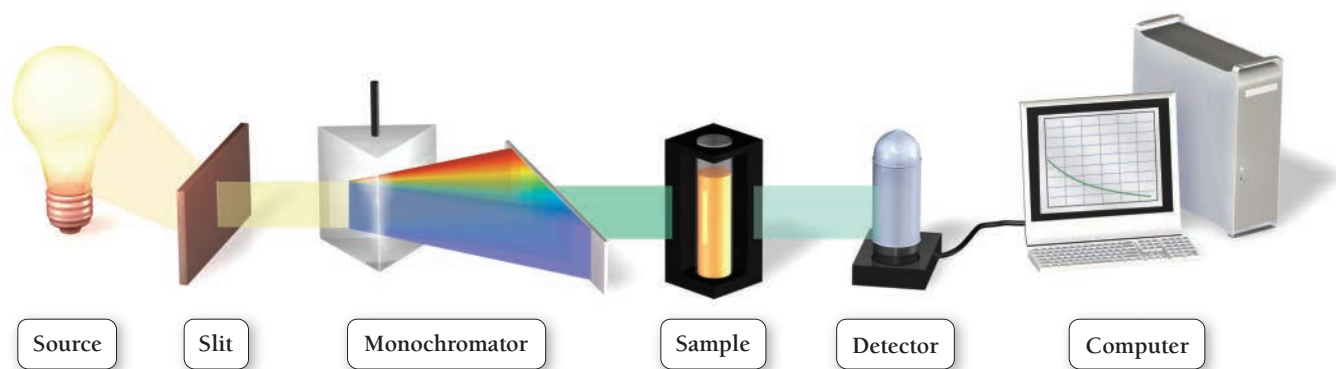
- 0.0500 M/s
- 0.100 M/s
- 0.200 M/s
- +0.200 M/s

14.2

Conceptual
Connection

**Measuring Reaction Rates**

In order to study the kinetics of a reaction, we must have an experimental way to measure the concentration of at least one of the reactants or products as a function of time. For example, Ludwig Wilhelm, whose experiment on the rate of the conversion of sucrose to glucose and fructose we discussed briefly in Section 14.2, took advantage of sucrose's ability to rotate polarized light. (Polarized light is light with

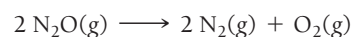


▲ **FIGURE 14.3 The Spectrometer** In a spectrometer, light of a specific wavelength is passed through the sample and the intensity of the transmitted light—which depends on how much light is absorbed by the sample—is measured and recorded.

an electric field oriented along one plane.) When a beam of polarized light is passed through a sucrose solution, the polarization of the light is rotated clockwise. In contrast, the combined products of the reaction (glucose and fructose) rotate polarized light counterclockwise. By measuring the degree of polarization of light passing through a reacting solution—a technique known as polarimetry—Wilhelmy was able to determine the relative concentrations of the reactants and products as a function of time.

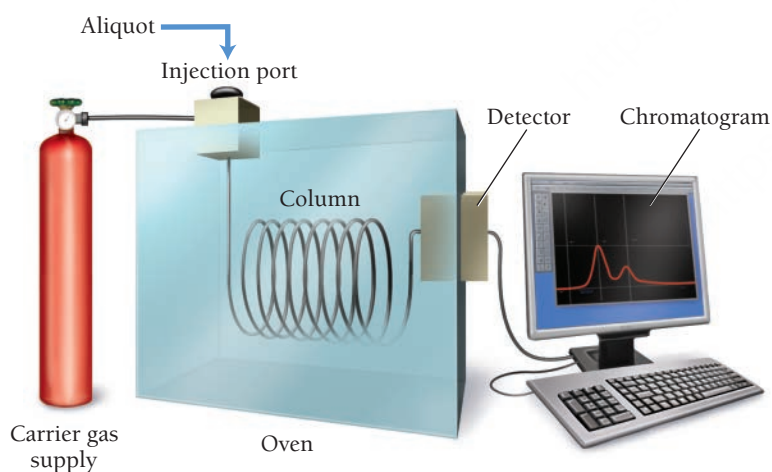
Perhaps the most common way to study the kinetics of a reaction is through spectroscopy (see Section 3.3). For example, we can follow the reaction of H_2 and I_2 to form HI spectroscopically because I_2 is violet and H_2 and HI are colorless. As I_2 reacts with H_2 to form HI , the violet color of the reaction mixture fades. We can monitor the fading color with a spectrometer, a device that passes light through a sample and measures how strongly the light is absorbed (**Figure 14.3** ▲). If the sample contains the reacting mixture, the intensity of the light absorption will decrease as the reaction proceeds, providing a direct measure of the concentration of I_2 as a function of time. Because light travels so fast and because experimental techniques can produce very short pulses of light, spectroscopy can be used to measure reactions that happen on time scales as short as several femtoseconds.

We can also monitor reactions in which the number of moles of gaseous reactants and products changes as the reaction proceeds by measuring changes in pressure. Consider the reaction in which dinitrogen monoxide reacts to form nitrogen and oxygen gas:



For every 2 moles of N_2O that reacts, the reaction vessel will contain 1 additional mole of gas. As the reaction proceeds and the amount of gas increases, the pressure steadily rises. We can use the rise in pressure to determine the relative concentrations of reactants and products as a function of time.

The three techniques mentioned here—polarimetry, spectroscopy, and pressure measurement—can all be used to monitor a reaction as it occurs in a reaction vessel. Some reactions occur slowly enough that samples, or *aliquots*, can be periodically withdrawn from the reaction vessel and analyzed to determine the progress of the reaction. Instrumental techniques such as gas chromatography (**Figure 14.4** ◀) or mass spectrometry (see Section 1.9), as well as wet chemical techniques such as titration, can be used to measure the relative amounts of reactants or products in the aliquot. By taking aliquots at regular time intervals, we can determine the relative amounts of reactants and products as a function of time.



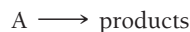
▲ **FIGURE 14.4 The Gas Chromatograph** In a gas chromatograph (GC), a sample of the reaction mixture, or aliquot, is injected into a specially constructed column. Because of their characteristic physical and chemical properties, different components of the mixture pass through the column at different rates and thus exit at different times. As each component leaves the column, it is identified electronically and a chromatogram is recorded. The area under each peak in the chromatogram is proportional to the amount of one particular component in the sample mixture.

14.4 The Rate Law: The Effect of Concentration on Reaction Rate



KEY CONCEPT VIDEO
The Rate Law for a Chemical Reaction

As we saw in Section 14.2, the rate of a reaction often depends on the concentration of one or more of the reactants. For simplicity, let's consider a reaction in which a single reactant, A, decomposes into products:



As long as the rate of the reverse reaction (in which the products return to reactants) is negligibly slow, we can express the relationship between the rate of the reaction and the concentration of the reactant—called the **rate law**—as follows:

$$\text{rate} = k[A]^n \quad [14.6]$$

where k is a constant of proportionality called the **rate constant** and n is the **reaction order**. The value of n (usually an integer) determines how the rate depends on the concentration of the reactant:

- If $n = 0$, the reaction is *zero order* and the rate is independent of the concentration of A.
- If $n = 1$, the reaction is *first order* and the rate is directly proportional to the concentration of A.
- If $n = 2$, the reaction is *second order* and the rate is proportional to the square of the concentration of A.

By definition, $[A]^0 = 1$, so the rate is equal to k regardless of $[A]$.

Although other orders are possible, including noninteger (or fractional) orders, we limit our current discussion to three orders.

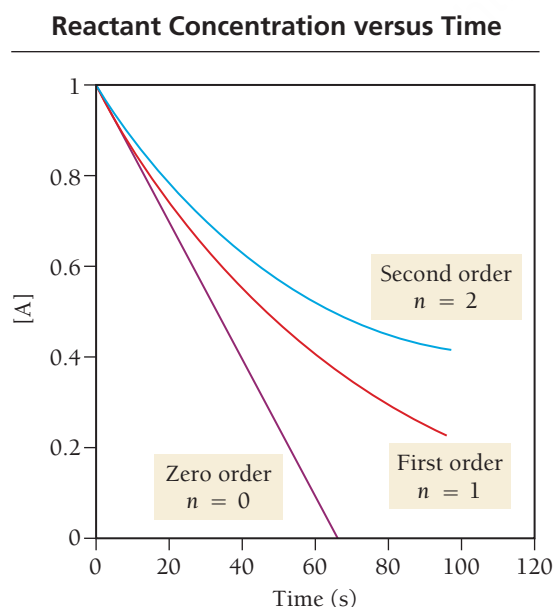
Reaction Orders

Figure 14.5 ▼ shows three plots illustrating how the *concentration of A changes with time* for the three common reaction orders with identical numerical values for the rate constant (k) and identical initial concentrations. **Figure 14.6** ▼ has three plots showing the *rate of the reaction* (the slope of the lines in Figure 14.5) *as a function of the reactant concentration* for each reaction order.

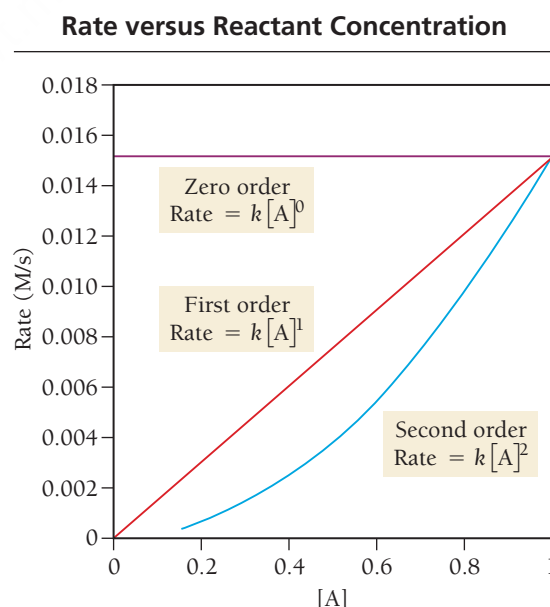
Zero-Order Reaction In a zero-order reaction, the rate of the reaction is independent of the concentration of the reactant:

$$\text{rate} = k[A]^0 = k \quad [14.7]$$

Consequently, for a zero-order reaction, the concentration of the reactant decreases linearly with time, as shown in Figure 14.5. The slope of the line is constant, indicating a constant rate. The rate is constant because




▲ **FIGURE 14.5** Reactant Molar Concentration as a Function of Time for Different Reaction Orders



▲ **FIGURE 14.6** Reaction Rate as a Function of Reactant Molar Concentration for Different Reaction Orders

Sublimation Is Zero Order



When one layer of particles sublimates, the next layer is exposed. The number of particles available to sublime remains constant.

▲ FIGURE 14.7 Sublimation

the reaction does not slow down as the concentration of A decreases. The graph in Figure 14.6 shows that the rate of a zero-order reaction is the same at any concentration of A. Zero-order reactions occur under conditions where the amount of reactant actually *available for reaction* is unaffected by changes in the *overall quantity of reactant*. For example, sublimation is normally zero order because only molecules at the surface can sublime, and their concentration does not change as the amount of subliming substance decreases (**Figure 14.7** ◀).

First-Order Reaction In a first-order reaction, the rate of the reaction is directly proportional to the concentration of the reactant:

$$\text{rate} = k[A]^1 \quad [14.8]$$

For a first-order reaction, the rate slows down as the reaction proceeds because the concentration of the reactant decreases. You can see this in Figure 14.5—the slope of the curve (the rate) becomes less steep (slower) with time. Figure 14.6 shows the rate as a function of the concentration of A. Notice the linear relationship—the rate is directly proportional to the concentration.

Second-Order Reaction In a second-order reaction, the rate of the reaction is proportional to the square of the concentration of the reactant:

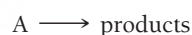
$$\text{rate} = k[A]^2 \quad [14.9]$$

Consequently, for a second-order reaction, the rate is even more sensitive to the reactant concentration. You can see this in Figure 14.5—the slope of the curve (the rate) flattens out more quickly than it does for a first-order reaction. Figure 14.6 shows the rate as a function of the concentration of A. Notice the quadratic relationship—the rate is proportional to the square of the concentration.

Determining the Order of a Reaction

The order of a reaction can be determined only by experiment. A common way to determine reaction order is the *method of initial rates*. In this method, the initial rate—the rate for a short period of time at the beginning of the reaction—is measured by running the reaction several times with different initial reactant concentrations to determine the effect of the concentration on the rate.

For example, let's return to our simple reaction in which a single reactant, A, decomposes into products:



In an experiment, the initial rate is measured at several different initial concentrations with the following results:

[A] (M)	Initial Rate (M/s)
0.10	0.015
0.20	0.030
0.40	0.060

In this data set, when the concentration of A doubles, the rate doubles—the initial rate is directly proportional to the initial concentration. The reaction is therefore first order in A, and the rate law takes the first-order form:

$$\text{rate} = k[A]^1$$

We can determine the value of the rate constant, k , by solving the rate law for k and substituting the concentration and the initial rate from any one of the three measurements (here we use the first measurement):

$$\text{rate} = k[A]^1$$

$$k = \frac{\text{rate}}{[A]} = \frac{0.015 \text{ M/s}}{0.10 \text{ M}} = 0.15 \text{ s}^{-1}$$

Notice that the rate constant for a first-order reaction has units of s^{-1} .

The following two data sets show how measured initial rates are different for zero-order and for second-order reactions having the same initial rate at $[A] = 0.10\text{ M}$:

Zero Order ($n = 0$)		Second Order ($n = 2$)	
[A] (M)	Initial Rate (M/s)	[A] (M)	Initial Rate (M/s)
0.10	0.015	0.10	0.015
0.20	0.015	0.20	0.060
0.40	0.015	0.40	0.240

For a zero-order reaction, the initial rate is independent of the reactant concentration—the rate is the same at all measured initial concentrations. For a second-order reaction, the initial rate quadruples for a doubling of the reactant concentration—the relationship between concentration and rate is quadratic. If we are unsure about how the initial rate is changing with the initial reactant concentration, or if the numbers are not as obvious as they are in these examples, we can substitute any two initial concentrations and the corresponding initial rates into a ratio of the rate laws to determine the order (n):

$$\frac{\text{rate 2}}{\text{rate 1}} = \frac{k[A]_2^n}{k[A]_1^n}$$

For example, we can substitute the last two measurements in the data set just given for the second-order reaction as follows:

$$\begin{aligned} \frac{0.240\text{ M/s}}{0.060\text{ M/s}} &= \frac{k(0.40\text{ M})^n}{k(0.20\text{ M})^n} \\ 4.0 &= \left(\frac{0.40}{0.20}\right)^n = 2^n \\ \log 4.0 &= \log (2^n) \\ &= n \log 2 \\ n &= \frac{\log 4}{\log 2} \\ &= 2 \end{aligned}$$

The rate constants for zero- and second-order reactions have different units than for first-order reactions. The rate constant for a zero-order reaction has units of $\text{M} \cdot \text{s}^{-1}$, and the rate constant for a second-order reaction has units of $\text{M}^{-1} \cdot \text{s}^{-1}$.

Remember that $\frac{x^n}{y^n} = \left(\frac{x}{y}\right)^n$.

Remember that $\log x^n = n \log x$.

Order of Reaction

The reaction $A \longrightarrow B$ has been experimentally determined to be second order. The initial rate is 0.0100 M/s at an initial concentration of A of 0.100 M . What is the initial rate at $[A] = 0.500\text{ M}$?
(a) 0.00200 M/s (b) 0.0100 M/s (c) 0.0500 M/s (d) 0.250 M/s

14.3



Conceptual Connection



Reaction Order for Multiple Reactants

So far, we have considered a simple reaction with only one reactant. How is the rate law defined for reactions with more than one reactant? Consider the generic reaction:



As long as the reverse reaction is negligibly slow, the rate law is proportional to the concentration of $[A]$ raised to the m power multiplied by the concentration of $[B]$ raised to the n power:

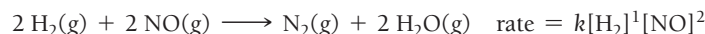
$$\text{rate} = k[A]^m[B]^n \tag{14.10}$$

where m is the reaction order with respect to A and n is the reaction order with respect to B. The **overall order** is the sum of the exponents ($m + n$). For example, the reaction between hydrogen and iodine has been

experimentally determined to be first order with respect to hydrogen, first order with respect to iodine, and thus second order overall:



Similarly, the reaction between hydrogen and nitrogen monoxide has been experimentally determined to be first order with respect to hydrogen, second order with respect to nitrogen monoxide, and thus third order overall:



As we have already noted, the rate law for any reaction must always be determined by experiment, often by the method of initial rates described previously. There is no way to simply look at a chemical equation and determine the rate law for the reaction. When the reaction has two or more reactants, the concentration of each reactant is usually varied independently of the others to determine the dependence of the rate on the concentration of that reactant. Example 14.2 shows how to use the method of initial rates to determine the order of a reaction with multiple reactants.

EXAMPLE 14.2

Determining the Order and Rate Constant of a Reaction

Interactive
Worked Example
Video 14.2

PEARSON
eText
2.0

Consider the reaction between nitrogen dioxide and carbon monoxide:



The initial rate of the reaction is measured at several different concentrations of the reactants with the results shown at right.

From the data, determine:

- the rate law for the reaction
- the rate constant (k) for the reaction

Experiment Number	[NO ₂] (M)	[CO] (M)	Initial Rate (M/s)
1	0.10	0.10	0.0021
2	0.20	0.10	0.0082
3	0.20	0.20	0.0083
4	0.40	0.10	0.033

SOLUTION

- Begin by examining how the rate changes for each change in concentration. Between the first two experiments, the concentration of NO₂ doubles, the concentration of CO stays constant, and the rate quadruples, suggesting that the reaction is second order in NO₂.

Between the second and third experiments, the concentration of NO₂ stays constant, the concentration of CO doubles, and the rate remains constant (the small change in the least significant figure is simply experimental error), suggesting that the reaction is zero order in CO.

Between the third and fourth experiments, the concentration of NO₂ again doubles and the concentration of CO halves, yet the rate quadruples again, confirming that the reaction is second order in NO₂ and zero order in CO.

Write the overall rate expression.

[NO ₂] (M)	[CO] (M)	Initial Rate (M/s)
0.10 M	0.10 M	0.0021
↓ × 2	↓ constant	↓ × 4
0.20 M	0.10 M	0.0082 M
↓ constant	↓ × 2	↓ × 1
0.20 M	0.20 M	0.0083 M
↓ × 2	↓ × 1/2	↓ × 4
0.40 M	0.10 M	0.033 M

$$\text{rate} = k[\text{NO}_2]^2[\text{CO}]^0 = k[\text{NO}_2]^2$$

(a) ALTERNATIVE APPROACH

If you can't easily see the relationships between the changes in concentrations and the changes in initial rates, you can determine the reaction order for any reactant by substituting any two initial rates and the corresponding initial concentrations into a ratio of the rate laws to determine the order (n).

For NO₂ use the first and second concentrations and rates (because [NO₂] changes here, but [CO] is constant).


$$\frac{\text{rate 2}}{\text{rate 1}} = \frac{k[\text{A}]_2^n}{k[\text{A}]_1^n}$$

$$\text{For NO}_2 \quad \frac{\text{rate 2}}{\text{rate 1}} = \frac{k[\text{NO}_2]_2^n}{k[\text{NO}_2]_1^n}$$

<p>Substitute the rates and concentrations into the expression for the ratio of the rate constants.</p> <p>Take the log of both sides of the equation and solve for n.</p> <p>For CO, use the second and third concentrations and rates (because [CO] changes here, but [NO₂] is constant).</p> <p>Substitute the rates and concentrations into the expression for the ratio of the rate constants.</p> <p>Take the log of both sides of the equation and solve for n.</p> <p>Write the overall rate expression from the orders of each reactant.</p>	$\frac{0.082 \text{ M/s}}{0.021 \text{ M/s}} = \frac{k(0.20 \text{ M})^n}{k(0.10 \text{ M})^n}$ $3.9 = \left(\frac{0.20}{0.10}\right)^n = 2^n$ $\log 3.9 = \log 2^n$ $= n \log 2$ $n = \frac{\log 3.9}{\log 2}$ $= 1.96 = 2$ <p>For CO $\frac{\text{rate 3}}{\text{rate 2}} = \frac{k[\text{CO}]_3^n}{k[\text{CO}]_2^n}$</p> $\frac{0.083 \text{ M/s}}{0.082 \text{ M/s}} = \frac{k(0.20 \text{ M})^n}{k(0.10 \text{ M})^n}$ $1.01 = \left(\frac{0.20}{0.10}\right)^n = 2^n$ $\log 1.01 = \log 2^n$ $= n \log 2$ $n = \frac{\log 1.01}{\log 2}$ $= 0.01 = 0.0$ $\text{rate} = k[\text{NO}_2]^2[\text{CO}]^0 = k[\text{NO}_2]^2$
<p>(b) To determine the rate constant for the reaction, solve the rate law for k and substitute the concentration and the initial rate from any one of the four measurements. In this case, we use the first measurement.</p>	$\text{rate} = k[\text{NO}_2]^2$ $k = \frac{\text{rate}}{[\text{NO}_2]^2} = \frac{0.0021 \text{ M/s}}{(0.10 \text{ M})^2} = 0.21 \text{ M}^{-1} \cdot \text{s}^{-1}$

FOR PRACTICE 14.2

Consider the equation:



The initial rate of reaction is measured at several different concentrations of the reactants with the following results:

[CHCl ₃] (M)	[Cl ₂] (M)	Initial Rate (M/s)
0.010	0.010	0.0035
0.020	0.010	0.0069
0.020	0.020	0.0098
0.040	0.040	0.027

From the data, determine:

- (a) the rate law for the reaction
- (b) the rate constant (k) for the reaction



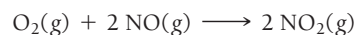
14.4

Cc

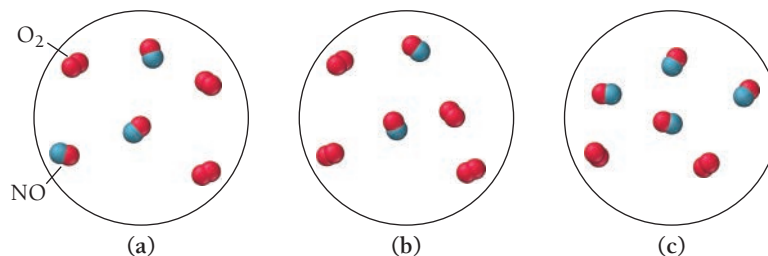
Conceptual
Connection

Rate and Concentration

This reaction was experimentally determined to be first order with respect to O_2 and second order with respect to NO .



These diagrams represent reaction mixtures in which the number of each type of molecule represents its relative initial concentration. Which mixture has the fastest initial rate?



KEY CONCEPT VIDEO
The Integrated Rate Law

14.5 The Integrated Rate Law: The Dependence of Concentration on Time

The rate laws we have examined so far show the relationship between *the rate of a reaction and the concentration of a reactant*. But we often want to know the relationship between *the concentration of a reactant and time*. For example, the presence of chlorofluorocarbons (CFCs) in the atmosphere threatens the ozone layer. One of the reasons that CFCs pose such a significant threat is that the reactions that consume them are so slow (see Table 14.1). Legislation has significantly reduced CFC emissions, but even if we were to completely stop adding CFCs to the atmosphere, their concentration would decrease only very slowly. Nonetheless, we would like to know how their concentration changes with time. How much will be left in 20 years? In 50 years?

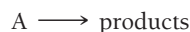
TABLE 14.1 Atmospheric Lifetimes of Several CFCs

CFC Name	Structure	Atmospheric Lifetime*
CFC-11 (CCl_3F) trichlorofluoromethane		45 years
CFC-12 (CCl_2F_2) dichlorodifluoromethane		100 years
CFC-113 ($\text{C}_2\text{F}_3\text{Cl}_3$) 1,1,2-trichloro-1,2,2-trifluoroethane		85 years
CFC-114 ($\text{C}_2\text{F}_4\text{Cl}_2$) 1,2-dichlorotetrafluoroethane		300 years
CFC-115 ($\text{C}_2\text{F}_5\text{Cl}$) monochloropentafluoroethane		1700 years

*Data taken from EPA site (under Section 602 of Clean Air Act).

Integrated Rate Laws

The **integrated rate law** for a chemical reaction is a relationship between the concentrations of the reactants and time. For simplicity, we return to a single reactant decomposing into products:



The integrated rate law for this reaction depends on the order of the reaction; let's examine each of the common reaction orders individually.

First-Order Integrated Rate Law If our simple reaction is first order, the rate is directly proportional to the concentration of A:

$$\text{rate} = k[A]$$

Because $\text{rate} = -\Delta[A]/\Delta t$, we can write:

$$-\frac{\Delta[A]}{\Delta t} = k[A] \quad [14.11]$$

In this form, the rate law is also known as the *differential rate law*.

Although we do not show the steps here, we can use calculus (see end-of-chapter Exercise 114) to integrate the differential rate law and obtain the first-order *integrated rate law*:

$$\ln[A]_t = -kt + \ln[A]_0 \quad [14.12]$$

or

$$\ln \frac{[A]_t}{[A]_0} = -kt \quad [14.13]$$

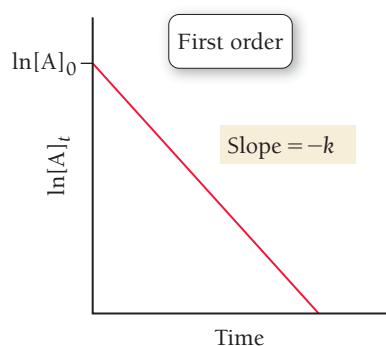
where $[A]_t$ is the concentration of A at any time t , k is the rate constant, and $[A]_0$ is the initial concentration of A. These two forms of the equation are equivalent, as shown in the margin.

Notice that the integrated rate law shown in Equation 14.12 has the form of an equation for a straight line:

$$\ln[A]_t = -kt + \ln[A]_0$$

$$y = mx + b$$

For a first-order reaction, a plot of the natural log of the reactant concentration as a function of time yields a straight line with a slope of $-k$ and a y-intercept of $\ln[A]_0$, as shown in **Figure 14.8** ▼. (Note that the slope is negative but that the rate constant is always positive.)



◀ **FIGURE 14.8 First-Order Integrated Rate Law** For a first-order reaction, a plot of the natural log of the reactant concentration as a function of time yields a straight line. The slope of the line is equal to $-k$, and the y-intercept is $\ln[A]_0$.

$$\ln[A]_t = -kt + \ln[A]_0$$

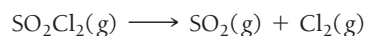
$$\ln[A]_t - \ln[A]_0 = -kt$$

$$\ln \frac{[A]_t}{[A]_0} = -kt$$

$$\text{Remember that } \ln A - \ln B = \ln\left(\frac{A}{B}\right).$$

EXAMPLE 14.3**The First-Order Integrated Rate Law: Using Graphical Analysis of Reaction Data**

Consider the equation for the decomposition of SO_2Cl_2 :



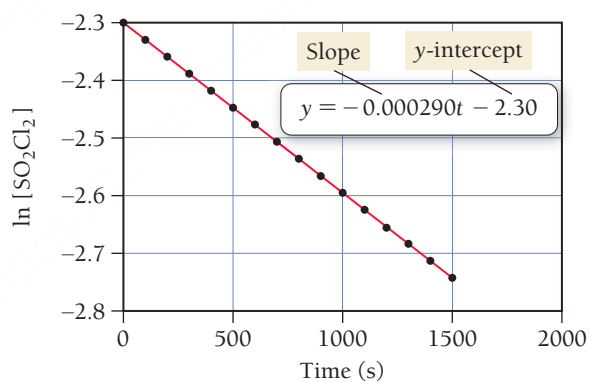
The concentration of SO_2Cl_2 is monitored at a fixed temperature as a function of time during the decomposition reaction, and the following data are tabulated:

Time (s)	$[\text{SO}_2\text{Cl}_2]$ (M)	Time (s)	$[\text{SO}_2\text{Cl}_2]$ (M)
0	0.100	800	0.0793
100	0.0971	900	0.0770
200	0.0944	1000	0.0748
300	0.0917	1100	0.0727
400	0.0890	1200	0.0706
500	0.0865	1300	0.0686
600	0.0840	1400	0.0666
700	0.0816	1500	0.0647

Show that the reaction is first order, and determine the rate constant for the reaction.

SOLUTION

In order to show that the reaction is first order, prepare a graph of $\ln[\text{SO}_2\text{Cl}_2]$ versus time as shown.



The plot is linear, confirming that the reaction is indeed first order. To obtain the rate constant, fit the data to a line. The slope of the line will be equal to $-k$. Since the slope of the best-fitting line (which is most easily determined on a graphing calculator or with spreadsheet software such as Microsoft Excel) is $-2.90 \times 10^{-4} \text{ s}^{-1}$, the rate constant is therefore $+2.90 \times 10^{-4} \text{ s}^{-1}$.

FOR PRACTICE 14.3

Use the graph and the best-fitting line in Example 14.3 to predict the concentration of SO_2Cl_2 at 1900 s.

EXAMPLE 14.4**The First-Order Integrated Rate Law: Determining the Concentration of a Reactant at a Given Time**Interactive
Worked Example
Video 14.4PEARSON
eText
2.0

In Example 14.3, you determined that the decomposition of SO_2Cl_2 (under the given reaction conditions) is first order and has a rate constant of $+2.90 \times 10^{-4} \text{ s}^{-1}$. If the reaction is carried out at the same temperature and the initial concentration of SO_2Cl_2 is 0.0225 M, what is the concentration of SO_2Cl_2 after 865 s?

SORT You are given the rate constant of a first-order reaction and the initial concentration of the reactant and asked to find the concentration at 865 seconds.

GIVEN: $k = +2.90 \times 10^{-4} \text{ s}^{-1}$

$[\text{SO}_2\text{Cl}_2]_0 = 0.0225 \text{ M}$

FIND: $[\text{SO}_2\text{Cl}_2]$ at $t = 865 \text{ s}$

STRATEGIZE Refer to the first-order integrated rate law to determine the information you are asked to find.

EQUATION $\ln[A]_t = -kt + \ln[A]_0$

SOLVE Substitute the rate constant, the initial concentration, and the time into the integrated rate law.

SOLUTION

$\ln[\text{SO}_2\text{Cl}_2]_t = -kt + \ln[\text{SO}_2\text{Cl}_2]_0$

$\ln[\text{SO}_2\text{Cl}_2]_t = -(2.90 \times 10^{-4} \text{ s}^{-1}) 865 \text{ s} + \ln[0.0225]$

$\ln[\text{SO}_2\text{Cl}_2]_t = -0.251 - 3.79$

$[\text{SO}_2\text{Cl}_2]_t = e^{-4.04}$

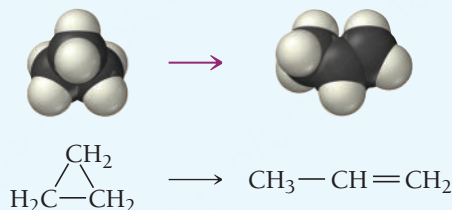
$= 0.0175 \text{ M}$

Solve the integrated rate law for the concentration of $[\text{SO}_2\text{Cl}_2]_t$.

CHECK The concentration is smaller than the original concentration as expected. If the concentration were larger than the initial concentration, this would indicate a mistake in the signs of one of the quantities on the right-hand side of the equation.

FOR PRACTICE 14.4

Cyclopropane rearranges to form propene in the gas phase.



The reaction is first order in cyclopropane and has a measured rate constant of $3.36 \times 10^{-5} \text{ s}^{-1}$ at 720 K. If the initial cyclopropane concentration is 0.0445 M, what is the cyclopropane concentration after 235.0 minutes?

Second-Order Integrated Rate Law If our simple reaction ($A \longrightarrow \text{products}$) is second order, the rate is proportional to the square of the concentration of A:

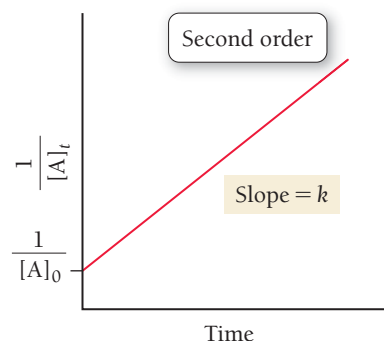
$$\text{rate} = k[A]^2$$

Because $\text{rate} = -\Delta[A]/\Delta t$, we can write:

$$-\frac{\Delta[A]}{\Delta t} = k[A]^2 \quad [14.14]$$

Again, although we do not show the steps here, this differential rate law can be integrated to obtain the *second-order integrated rate law*:

$$\frac{1}{[A]_t} = kt + \frac{1}{[A]_0} \quad [14.15]$$



▲ FIGURE 14.9 Second-Order Integrated Rate Law For a second-order reaction, a plot of the inverse of the reactant concentration as a function of time yields a straight line. The slope of the line is equal to k , and the y -intercept is $\ln[A]_0$.

Time (s)	[NO ₂] (M)
0	0.01000
50	0.00887
100	0.00797
150	0.00723
200	0.00662
250	0.00611
300	0.00567
350	0.00528
400	0.00495
450	0.00466
500	0.00440
550	0.00416
600	0.00395
650	0.00376
700	0.00359
750	0.00343
800	0.00329
850	0.00316
900	0.00303
950	0.00292
1000	0.00282

The second-order integrated rate law is also in the form of an equation for a straight line:

$$\frac{1}{[A]_t} = kt + \frac{1}{[A]_0}$$

$$y = mx + b$$

However, you must plot the inverse of the concentration of the reactant as a function of time. The plot yields a straight line with a slope of k and an intercept of $1/[A]_0$ as shown in **Figure 14.9** ◀.

EXAMPLE 14.5

The Second-Order Integrated Rate Law: Using Graphical Analysis of Reaction Data

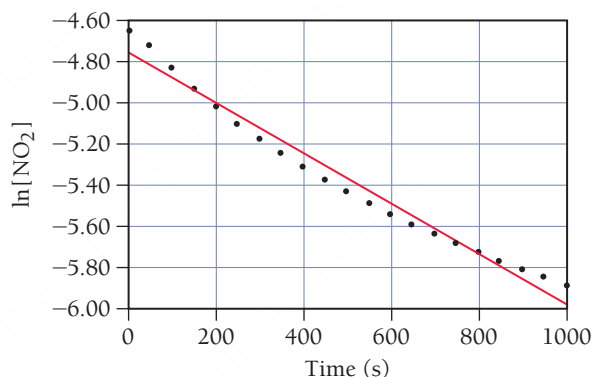
Consider the equation for the decomposition of NO₂:



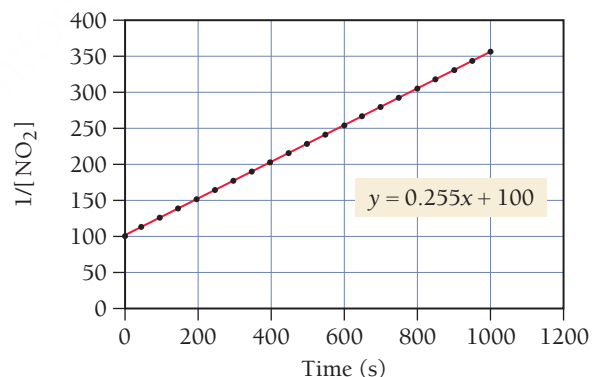
The concentration of NO₂ is monitored at a fixed temperature as a function of time during the decomposition reaction, and the data are tabulated in the table in the margin. Show by graphical analysis that the reaction is not first order and that it is second order. Determine the rate constant for the reaction.

SOLUTION

To show that the reaction is not first order, prepare a graph of $\ln[\text{NO}_2]$ versus time as shown:



The plot is *not* linear (the straight line does not fit the data points), confirming that the reaction is not first order. In order to show that the reaction is second order, prepare a graph of $1/[\text{NO}_2]$ versus time as shown:



This graph is linear (the data points fit well to a straight line), confirming that the reaction is indeed second order. To obtain the rate constant, determine the slope of the best-fitting line. The slope is $0.255 \text{ M}^{-1} \cdot \text{s}^{-1}$; therefore, the rate constant is $0.255 \text{ M}^{-1} \cdot \text{s}^{-1}$.

FOR PRACTICE 14.5

Use the graph and the best-fitting line in Example 14.5 to predict the concentration of NO₂ at 2000 s.

Zero-Order Integrated Rate Law If our simple reaction is zero order, the rate is proportional to a constant:

$$\text{rate} = k[A]^0 = k$$

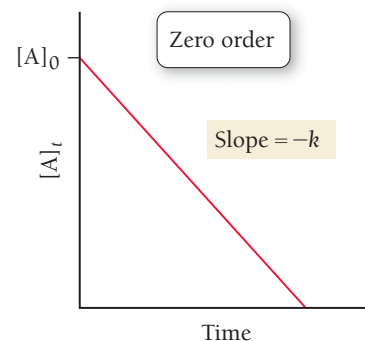
Since $\text{rate} = -\Delta[A]/\Delta t$, we can write:

$$-\frac{\Delta[A]}{\Delta t} = k \quad [14.16]$$

We can integrate this differential rate law to obtain the *zero-order integrated rate law*:

$$[A]_t = -kt + [A]_0 \quad [14.17]$$

The zero-order integrated rate law in Equation 14.17 is also in the form of an equation for a straight line. A plot of the concentration of the reactant as a function of time yields a straight line with a slope of $-k$ and an intercept of $[A]_0$, as shown in **Figure 14.10** ►.



▲ FIGURE 14.10 Zero-Order Integrated Rate Law For a zero-order reaction, a plot of the reactant concentration as a function of time yields a straight line. The slope of the line is equal to $-k$, and the y-intercept is $[A]_0$.

The Half-Life of a Reaction

The **half-life** ($t_{1/2}$) of a reaction is the time required for the concentration of a reactant to fall to one-half of its initial value. For example, if a reaction has a half-life of 100 seconds, and if the initial concentration of the reactant is 1.0 M, the concentration will fall to 0.50 M in 100 s. The half-life expression—which defines the dependence of half-life on the rate constant and the initial concentration—is different for different reaction orders.

First-Order Reaction Half-Life From the definition of half-life, and from the integrated rate law, we can derive an expression for the half-life. For a first-order reaction, the integrated rate law is:

$$\ln \frac{[A]_t}{[A]_0} = -kt$$

At a time equal to the half-life ($t = t_{1/2}$), the concentration is exactly half of the initial concentration: ($[A]_t = \frac{1}{2}[A]_0$). Therefore, when $t = t_{1/2}$ we can write the following expression:

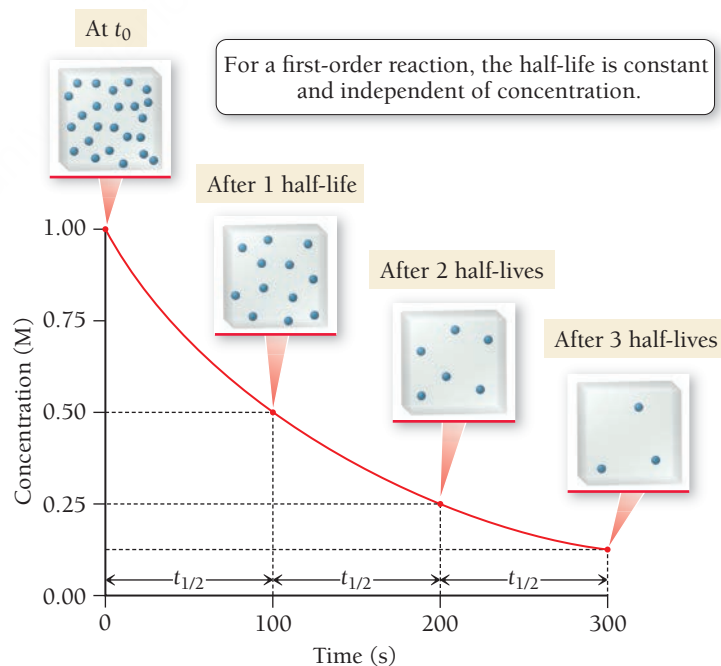
$$\ln \frac{\frac{1}{2}[A]_0}{[A]_0} = \ln \frac{1}{2} = -kt_{1/2} \quad [14.18]$$

Solving for $t_{1/2}$, and substituting -0.693 for $\ln \frac{1}{2}$, we arrive at the expression for the half-life of a first-order reaction:

$$t_{1/2} = \frac{0.693}{k} \quad [14.19]$$

Notice that, for a first-order reaction, $t_{1/2}$ is *independent of the initial concentration*. For example, if $t_{1/2}$ is 100 s, and if the initial concentration is 1.0 M, the concentration falls to 0.50 M in 100 s, to 0.25 M in another 100 s, to 0.125 M in another 100 s, and so on (**Figure 14.11** ►). Even though the concentration is changing as the reaction proceeds, the half-life (how long it takes for the concentration to halve) is constant. A constant half-life is unique to first-order reactions, making the concept of half-life particularly useful for first-order reactions.

Half-Life for a First-Order Reaction



▲ FIGURE 14.11 Half-Life: Concentration versus Time for a First-Order Reaction For this reaction, the concentration decreases by one-half every 100 seconds ($t_{1/2} = 100$ s). The blue spheres represent reactant molecules (the products are omitted for clarity).

EXAMPLE 14.6**Determining Half-Life for a First-Order Reaction**

Molecular iodine dissociates at 625 K with a first-order rate constant of 0.271 s^{-1} . What is the half-life of this reaction?

SOLUTION

Because the reaction is first order, the half-life is given by Equation 14.19. Substitute the value of k into the expression and calculate $t_{1/2}$.

$$\begin{aligned} t_{1/2} &= \frac{0.693}{k} \\ &= \frac{0.693}{0.271/\text{s}} = 2.56 \text{ s} \end{aligned}$$

FOR PRACTICE 14.6

A first-order reaction has a half-life of 26.4 seconds. How long does it take for the concentration of the reactant in the reaction to fall to one-eighth of its initial value?

Second-Order Reaction Half-Life For a second-order reaction, the integrated rate law is:

$$\frac{1}{[A]_t} = kt + \frac{1}{[A]_0}$$

At a time equal to the half-life ($t = t_{1/2}$), the concentration is exactly one-half of the initial concentration ($[A]_t = \frac{1}{2}[A]_0$). We can therefore write the following expression at $t = t_{1/2}$:

$$\frac{1}{\frac{1}{2}[A]_0} = kt_{1/2} + \frac{1}{[A]_0} \quad [14.20]$$

And solve for $t_{1/2}$:

$$\begin{aligned} kt_{1/2} &= \frac{1}{\frac{1}{2}[A]_0} - \frac{1}{[A]_0} \\ kt_{1/2} &= \frac{2}{[A]_0} - \frac{1}{[A]_0} \\ t_{1/2} &= \frac{1}{k[A]_0} \end{aligned} \quad [14.21]$$

Notice that, for a second-order reaction, the half-life depends on the initial concentration. So if the initial concentration of a reactant in a second-order reaction is 1.0 M, and the half-life is 100 s, the concentration falls to 0.50 M in 100 s. However, the time it takes for the concentration to fall to 0.25 M is now *longer than 100 s* because the initial concentration has decreased. Thus, the half-life continues to get longer as the concentration decreases.

Zero-Order Reaction Half-Life For a zero-order reaction, the integrated rate law is:

$$[A]_t = -kt + [A]_0$$

Making the substitutions ($t = t_{1/2}$; $[A]_t = \frac{1}{2}[A]_0$), we can write the expression at $t = t_{1/2}$:

$$\frac{1}{2}[A]_0 = -kt_{1/2} + [A]_0 \quad [14.22]$$

We then solve for $t_{1/2}$:

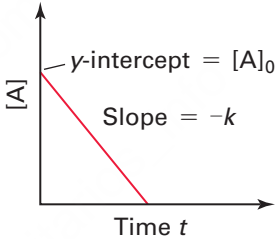
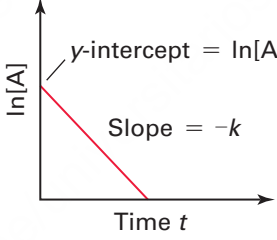
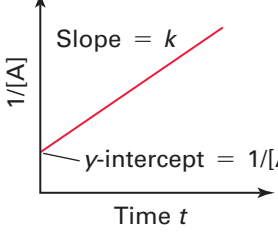
$$t_{1/2} = \frac{[A]_0}{2k} \quad [14.23]$$

Notice that, for a zero-order reaction, the half-life also depends on the initial concentration; however, unlike in the second-order case, the two are directly proportional—the half-life gets *shorter* as the concentration decreases.

Summarizing Basic Kinetic Relationships (see Table 14.2):

- The reaction order and rate law must be determined experimentally.
- The rate law relates the *rate* of the reaction to the *concentration* of the reactant(s).
- The integrated rate law (which is mathematically derived from the rate law) relates the *concentration* of the reactant(s) to *time*.
- The half-life is the time it takes for the concentration of a reactant to fall to one-half of its initial value.
- The half-life of a first-order reaction is independent of the initial concentration.
- The half-lives of zero-order and second-order reactions depend on the initial concentration.

TABLE 14.2 Rate Law Summary Table

Order	Rate Law	Units of k	Integrated Rate Law	Straight-Line Plot	Half-Life Expression
0	Rate = $k[A]^0$	$M \cdot s^{-1}$	$[A]_t = -kt + [A]_0$		$t_{1/2} = \frac{[A]_0}{2k} = \frac{1}{k} \frac{[A]_0}{2}$
1	Rate = $k[A]^1$	s^{-1}	$\ln[A]_t = -kt + \ln[A]_0$ $\ln \frac{[A]_t}{[A]_0} = -kt$		$t_{1/2} = \frac{0.693}{k} = \frac{1}{k} (0.693)$
2	Rate = $k[A]^2$	$M^{-1} \cdot s^{-1}$	$\frac{1}{[A]_t} = kt + \frac{1}{[A]_0}$		$t_{1/2} = \frac{1}{k[A]_0} = \frac{1}{k} \frac{1}{[A]_0}$

Rate Law and Integrated Rate Law

A decomposition reaction, with a rate that is observed to slow down as the reaction proceeds, has a half-life that depends on the initial concentration of the reactant. Which statement is most likely true for this reaction?

- (a) A plot of the natural log of the concentration of the reactant as a function of time is linear.
- (b) The half-life of the reaction increases as the initial concentration increases.
- (c) Doubling the initial concentration of the reactant results in quadrupling the rate.

14.5



Conceptual Connection





KEY CONCEPT VIDEO
The Effect of Temperature on
Reaction Rate

14.6 The Effect of Temperature on Reaction Rate

As we saw in Sections 14.1 and 14.2, the rates of chemical reactions are, in general, highly sensitive to temperature. Around room temperature, for example, a 10 °C increase in temperature increases the rate of a typical biological reaction by two or three times. Recall that the rate law for a reaction is $\text{Rate} = k[A]^n$. The temperature dependence of the reaction rate is contained in the rate constant, k (which is actually a constant only when the temperature remains constant). An increase in temperature generally results in an increase in k , which results in a faster rate.

The Arrhenius Equation

In 1889, Swedish chemist Svante Arrhenius (1859–1927) wrote a paper quantifying the temperature dependence of the rate constant. The modern form of the **Arrhenius equation** shows the relationship between the rate constant (k) and the temperature in kelvin (T):

$$k = A e^{\frac{-E_a}{RT}}$$

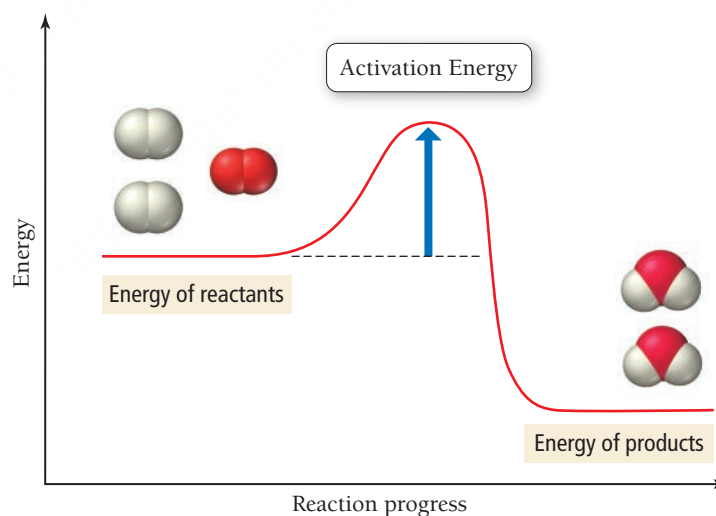
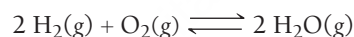
Frequency factor
Activation energy
Exponential factor

[14.24]

In this equation, R is the gas constant (8.314 J/mol · K), A is a constant called the *frequency factor* (or the *pre-exponential factor*), and E_a is the *activation energy* (or *activation barrier*), which we briefly examined in Section 14.2.

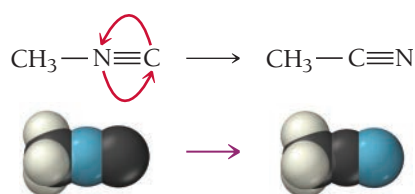
The **activation energy** E_a is an energy barrier or hump that must be surmounted for the reactants to be transformed into products (**Figure 14.12** ▼). We examine the frequency factor more closely in the next section of the chapter; for now, we can think of the **frequency factor** (A) as the number of times that the reactants approach the activation barrier per unit time.

Activation Energy



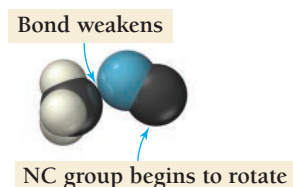
► **FIGURE 14.12 The Activation Energy Barrier** Even though the reaction is energetically favorable (the energy of the products is lower than that of the reactants), the reactants must overcome the energy barrier in order to react.

To understand each of these quantities better, we can look more closely at the simple reaction in which CH_3NC (methyl isonitrile) rearranges to form CH_3CN (acetonitrile):



Let's examine the physical meaning of the activation energy, frequency factor, and exponential factor for this reaction.

The Activation Energy Figure 14.13 ► illustrates the energy of a molecule as the reaction proceeds. The x-axis represents the progress of the reaction from left (reactant) to right (product). To get from the reactant to the product, the molecule must go through a high-energy intermediate state called the **activated complex** or **transition state**. Even though the overall reaction is energetically downhill (exothermic), it must first go uphill to reach the activated complex because energy is required to initially weaken the $\text{H}_3\text{C}-\text{N}$ bond and allow the NC group to begin to rotate:



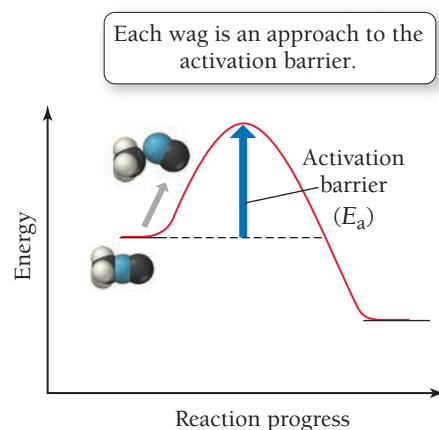
The energy required to reach the activated complex is the *activation energy*. In general, the higher the activation energy, the slower the reaction rate (at a given temperature).

The Frequency Factor Recall that the frequency factor represents the number of approaches to the activation barrier per unit time. Any time that the NC group begins to rotate, it approaches the activation barrier. For this reaction, the frequency factor represents the rate at which the NC part of the molecule wags (vibrates side to side). With each wag, the reactant approaches the activation barrier. However, approaching the activation barrier is not equivalent to surmounting the barrier. Most of the approaches do not have enough total energy to make it over the activation barrier.

The Exponential Factor The **exponential factor** is a number between 0 and 1 that represents the fraction of molecules that have enough energy to make it over the activation barrier on a given approach. The exponential factor is the fraction of approaches that are actually successful and result in the product. For example, if the frequency factor is $10^9/\text{s}$ and the exponential factor is 10^{-7} at a certain temperature, then the overall rate constant at that temperature is $10^9/\text{s} \times 10^{-7} = 10^2/\text{s}$. In this case, the CN group is wagging at a rate of $10^9/\text{s}$. With each wag, the activation barrier is approached. However, for a given wag only 1 in 10^7 molecules has sufficient energy to actually make it over the activation barrier.

The exponential factor depends on both the temperature (T) and the activation energy (E_a) of the reaction.

$$\text{Exponential factor} = e^{-E_a/RT}$$



A low activation energy and a high temperature make the negative exponent small, so the exponential factor approaches one. For example, if the activation energy is zero, the exponent is zero, and the exponential factor is exactly one ($e^0 = 1$): every approach to the activation barrier is successful. By contrast, a large activation energy and a low temperature make the exponent a very large negative number, so the exponential factor becomes very small. For example, as the temperature approaches 0 K, the exponent approaches an infinitely large number, and the exponential factor approaches zero ($e^{-\infty} = 0$).

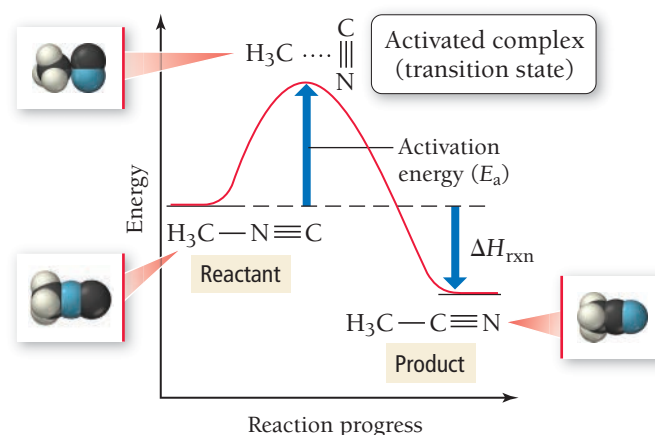
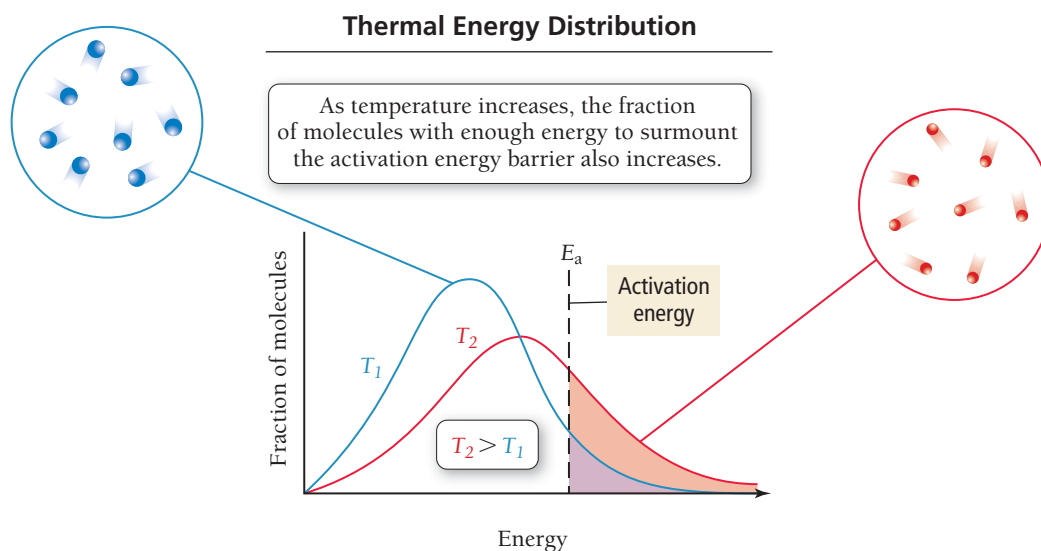


FIGURE 14.13 The Activated Complex The reaction pathway includes a transition state—the activated complex—that has a higher energy than either the reactant or the product.

► **FIGURE 14.14 Thermal Energy**

Distribution At any given temperature, the atoms or molecules in a gas sample have a range of energies. The higher the temperature, the wider the energy distribution and the greater the average energy. The fraction of molecules with enough energy to surmount the activation energy barrier and react (shaded regions) increases sharply as the temperature rises.



As the temperature increases, the number of molecules having enough thermal energy to surmount the activation barrier increases. At any given temperature, a sample of molecules has a distribution of energies, as shown in **Figure 14.14** ▲. Under common circumstances, only a small fraction of the molecules has enough energy to make it over the activation barrier. Because of the shape of the energy distribution curve, however, a small change in temperature results in a large difference in the number of molecules having enough energy to surmount the activation barrier. This explains the sensitivity of reaction rates to temperature. This sensitivity depends on the magnitude of the activation barrier—the *higher the barrier, the greater the temperature sensitivity of the rate*.

Summarizing Temperature and Reaction Rate:

- The frequency factor is the number of times that the reactants approach the activation barrier per unit time.
- The exponential factor is the fraction of the approaches that are successful in surmounting the activation barrier and forming products.
- The exponential factor increases with increasing temperature but decreases with increasing activation energy.

Arrhenius Plots: Experimental Measurements of the Frequency Factor and the Activation Energy

The frequency factor and activation energy are important quantities in understanding the kinetics of any reaction. To see how we measure these factors in the laboratory, consider again Equation 14.24: $k = Ae^{-E_a/RT}$. Taking the natural log of both sides of this equation, we get the following result:

$$\begin{aligned}\ln k &= \ln (Ae^{-E_a/RT}) \\ \ln k &= \ln A + \ln e^{-E_a/RT} \\ \ln k &= \ln A - \frac{E_a}{RT}\end{aligned}\quad [14.25]$$

$$\begin{aligned}\ln k &= -\frac{E_a}{R} \left(\frac{1}{T} \right) + \ln A \\ y &= mx + b\end{aligned}\quad [14.26]$$

Equation 14.26 is in the form of a straight line. A plot of the natural log of the rate constant ($\ln k$) versus the inverse of the temperature in kelvins ($1/T$) yields a straight line with a slope of $-E_a/R$ and a y-intercept of $\ln A$. This type of plot is an **Arrhenius plot** and we commonly use it in the analysis of kinetic data, as shown in Example 14.7.

Remember that $\ln (AB) = \ln A + \ln B$.

Remember that $\ln e^x = x$.

Notice that the slope of the line depends on E_a . The higher the activation energy, the steeper the slope and the greater the temperature dependence of the rate constant.

EXAMPLE 14.7**Using an Arrhenius Plot to Determine Kinetic Parameters**

The decomposition of ozone shown here is important to many atmospheric reactions:



A study of the kinetics of the reaction results in the following data:

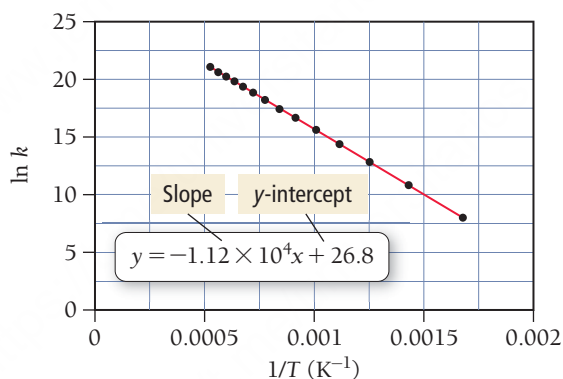
Temperature (K)	Rate Constant ($\text{M}^{-1} \cdot \text{s}^{-1}$)	Temperature (K)	Rate Constant ($\text{M}^{-1} \cdot \text{s}^{-1}$)
600	3.37×10^3	1300	7.83×10^7
700	4.85×10^4	1400	1.45×10^8
800	3.58×10^5	1500	2.46×10^8
900	1.70×10^6	1600	3.93×10^8
1000	5.90×10^6	1700	5.93×10^8
1100	1.63×10^7	1800	8.55×10^8
1200	3.81×10^7	1900	1.19×10^9

Determine the value of the frequency factor and activation energy for the reaction.

SOLUTION

To determine the frequency factor and activation energy, prepare a graph of the natural log of the rate constant ($\ln k$) versus the inverse of the temperature ($1/T$).

The plot is linear, as expected for Arrhenius behavior. The line that fits best has a slope of $-1.12 \times 10^4 \text{ K}$ and a y-intercept of 26.8. Calculate the activation energy from the slope by setting the slope equal to $-E_a/R$ and solving for E_a :



$$-1.12 \times 10^4 \text{ K} = \frac{-E_a}{R}$$

$$\begin{aligned} E_a &= 1.12 \times 10^4 \text{ K} \left(8.314 \frac{\text{J}}{\text{mol} \cdot \text{K}} \right) \\ &= 9.31 \times 10^4 \text{ J/mol} \\ &= 93.1 \text{ kJ/mol} \end{aligned}$$

Calculate the frequency factor (A) by setting the intercept equal to $\ln A$:

$$\begin{aligned} 26.8 &= \ln A \\ A &= e^{26.8} \\ &= 4.36 \times 10^{11} \end{aligned}$$

Because the rate constants are measured in units of $\text{M}^{-1} \cdot \text{s}^{-1}$, the frequency factor is in the same units. Consequently, we can conclude that the reaction has an activation energy of 93.1 kJ/mol and a frequency factor of $4.36 \times 10^{11} \text{ M}^{-1} \cdot \text{s}^{-1}$.

FOR PRACTICE 14.7

For the decomposition of ozone reaction in Example 14.7, use the results of the Arrhenius analysis to predict the rate constant at 298 K.

In an Arrhenius analysis, the pre-exponential factor (A) is assumed to be independent of temperature. Although the pre-exponential factor does depend on temperature to some degree, its temperature dependence is much less than that of the exponential factor and is often ignored.

In some cases, when either data are limited or plotting capabilities are absent, we can calculate the activation energy if we know the rate constant at just two different temperatures. We can apply the Arrhenius expression in Equation 14.26 to the two different temperatures as follows:

$$\ln k_2 = -\frac{E_a}{R}\left(\frac{1}{T_2}\right) + \ln A \qquad \ln k_1 = -\frac{E_a}{R}\left(\frac{1}{T_1}\right) + \ln A$$

We can then subtract $\ln k_1$ from $\ln k_2$:

$$\ln k_2 - \ln k_1 = \left[-\frac{E_a}{R}\left(\frac{1}{T_2}\right) + \ln A\right] - \left[-\frac{E_a}{R}\left(\frac{1}{T_1}\right) + \ln A\right]$$

Rearranging, we get the two-point form of the Arrhenius equation:

$$\ln \frac{k_2}{k_1} = \frac{E_a}{R}\left(\frac{1}{T_1} - \frac{1}{T_2}\right) \quad [14.27]$$

Example 14.8 demonstrates how to use this equation to calculate the activation energy from experimental measurements of the rate constant at two different temperatures.

EXAMPLE 14.8

Using the Two-Point Form of the Arrhenius Equation

Interactive
Worked Example
Video 14.8



Consider the reaction between nitrogen dioxide and carbon monoxide:



The rate constant at 701 K is measured as $2.57 \text{ M}^{-1} \cdot \text{s}^{-1}$, and that at 895 K is measured as $567 \text{ M}^{-1} \cdot \text{s}^{-1}$. Find the activation energy for the reaction in kJ/mol.

SORT You are given the rate constant of a reaction at two different temperatures and asked to find the activation energy.

GIVEN: $T_1 = 701 \text{ K}$, $k_1 = 2.57 \text{ M}^{-1} \cdot \text{s}^{-1}$
 $T_2 = 895 \text{ K}$, $k_2 = 567 \text{ M}^{-1} \cdot \text{s}^{-1}$
FIND: E_a

STRATEGIZE Use the two-point form of the Arrhenius equation, which relates the activation energy to the given information and R (a constant).

EQUATION: $\ln \frac{k_2}{k_1} = \frac{E_a}{R}\left(\frac{1}{T_1} - \frac{1}{T_2}\right)$

SOLVE Substitute the two rate constants and the two temperatures into the equation.

SOLUTION

$$\ln \frac{567 \text{ M}^{-1} \cdot \text{s}^{-1}}{2.57 \text{ M}^{-1} \cdot \text{s}^{-1}} = \frac{E_a}{R}\left(\frac{1}{701 \text{ K}} - \frac{1}{895 \text{ K}}\right)$$

$$5.40 = \frac{E_a}{R}\left(\frac{3.09 \times 10^{-4}}{\text{K}}\right)$$

$$E_a = 5.40\left(\frac{\text{K}}{3.09 \times 10^{-4}}\right)R$$

$$= 5.40\left(\frac{\text{K}}{3.09 \times 10^{-4}}\right)8.314 \frac{\text{J}}{\text{mol} \cdot \text{K}}$$

$$= 1.45 \times 10^5 \text{ J/mol}$$

$$= 145 \text{ kJ/mol}$$

Solve the equation for E_a , the activation energy, and convert to kJ/mol.

CHECK The magnitude of the answer is reasonable. Activation energies for most reactions range from tens to hundreds of kilojoules per mole.

FOR PRACTICE 14.8

Use the results from Example 14.8 and the given rate constant of the reaction at either of the two temperatures to predict the rate constant for this reaction at 525 K.

Temperature Dependence of Reaction Rate

Reaction A and reaction B have identical frequency factors. However, reaction B has a higher activation energy than reaction A. Which reaction has a greater rate constant at room temperature?

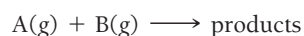
14.6

Cc

Conceptual
Connection

The Collision Model: A Closer Look at the Frequency Factor

We saw previously that the frequency factor in the Arrhenius equation represents the number of approaches to the activation barrier per unit time. Let's refine that idea for a reaction involving two gas-phase reactants:



Recall from Section 14.2 that in the **collision model** a chemical reaction occurs after a sufficiently energetic collision between two reactant molecules (**Figure 14.15** ▶). In collision theory, therefore, each approach to the activation barrier is a collision between the reactant molecules. Consequently, the value of the frequency factor should simply be the number of collisions that occur per second. However, the frequency factors of most (though not all) gas-phase chemical reactions tend to be smaller than the number of collisions that occur per second. As we saw in Section 14.2, not all sufficiently energetic collisions lead to products because the *orientations* of some of the collisions may not be adequate for the reaction to occur.

In the collision model, we can separate the frequency factor into two distinct parts, as shown in the following equations:

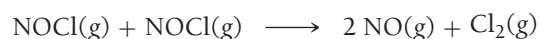
$$k = Ae^{\frac{-E_a}{RT}} = pze^{\frac{-E_a}{RT}}$$

Orientation factor
Collision frequency

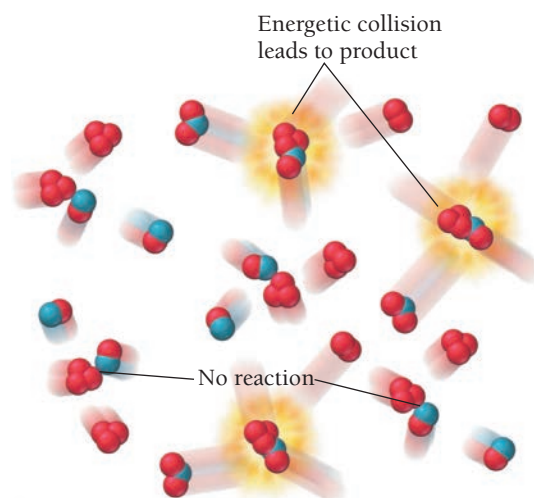
where p is the **orientation factor** and z is the **collision frequency**. The collision frequency is the number of collisions that occur per unit time, which we can calculate for a gas-phase reaction from the pressure of the gases and the temperature of the reaction mixture. Under typical gaseous conditions, a single molecule undergoes on the order of 10^9 collisions every second. The orientation factor is a number, usually between 0 and 1, which represents the fraction of collisions with an orientation that allows the reaction to occur.

The orientation factor is a measure of how specific the orientation of the colliding molecules must be. A large orientation factor (near 1) indicates that the colliding molecules can have virtually any orientation and the reaction will still occur. A small orientation factor indicates that the colliding molecules must have a highly specific orientation for the reaction to occur.

As an example, consider the reaction represented by the following equation:

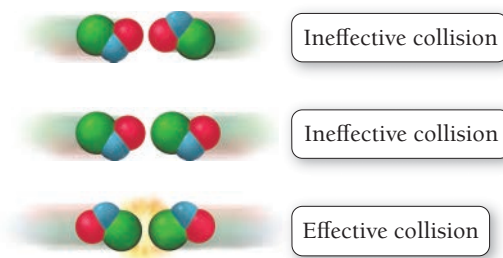


In order for the reaction to occur, two NOCl molecules must collide with sufficient energy. However, not all collisions with sufficient energy lead to products, because the reactant molecules must also be properly oriented. Consider the three possible collision orientations of the reactant molecules shown below. The first two collisions, even if they occur with sufficient energy, do not result in a reaction, because the

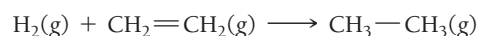


▲ FIGURE 14.15 The Collision Model In the collision model, molecules react after a sufficiently energetic collision with the correct orientation brings the reacting groups together.

reactant molecules are not oriented in a way that allows the chlorine atoms to bond. In other words, if two molecules are to react with each other, they must collide in such a way that allows the necessary bonds to break and form. For the reaction of NOCl(g) , the orientation factor is $p = 0.16$. This means that only 16 out of 100 sufficiently energetic collisions are actually successful in forming the products.

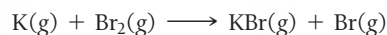


Some reactions have orientation factors that are much smaller than 1. Consider the reaction between hydrogen and ethene:



The orientation factor for this reaction is 1.7×10^{-6} , which means that fewer than two out of each million sufficiently energetic collisions actually form products. The small orientation factor indicates that the orientation requirements for this reaction are very stringent—the molecules must be aligned in a *very specific* way for the reaction to occur. Notice that, as we have seen many times, *structure affects properties*. In this case, the structure of the reactants affects how fast the reaction occurs.

Reactions between *individual atoms* usually have orientation factors of approximately 1 because atoms are spherically symmetric and thus any orientation can lead to the formation of products. A few reactions have orientation factors greater than 1. Consider the reaction between potassium and bromine:



This reaction has an orientation factor of $p = 4.8$. In other words, there are more reactions than collisions—the reactants do not even have to collide to react! Apparently, through a process dubbed *the harpoon mechanism*, a potassium atom can actually transfer an electron to a bromine molecule without a collision. The resulting positive charge on the potassium and the negative charge on the bromine cause the two species to attract each other and form a bond. The potassium atom essentially *harpoons* a passing bromine molecule with an electron and *reels it in* through the coulombic attraction between unlike charges.

We can picture a sample of reactive gases as a frenzy of collisions between the reacting atoms or molecules. At normal temperatures, the vast majority of these collisions do not have sufficient energy to overcome the activation barrier, and the atoms or molecules simply bounce off one another. Of the collisions having sufficient energy to overcome the activation barrier, most do not have the proper orientation for the reaction to occur (for the majority of common reactions). When two molecules with sufficient energy *and* the correct orientation collide, something extraordinary happens. The electrons on one of the atoms or molecules are attracted to the nuclei of the other; some bonds begin to weaken while other bonds begin to form and, if all goes well, the reactants go through the transition state and are transformed into the products. This is how a chemical reaction occurs.



14.7 Cc

Conceptual
Connection

Collision Theory

Which reaction would you expect to have the smallest orientation factor?

- (a) $\text{H}(\text{g}) + \text{I}(\text{g}) \longrightarrow \text{HI}(\text{g})$
- (b) $\text{H}_2(\text{g}) + \text{I}_2(\text{g}) \longrightarrow 2 \text{HI}(\text{g})$
- (c) $\text{HCl}(\text{g}) + \text{HCl}(\text{g}) \longrightarrow \text{H}_2(\text{g}) + \text{Cl}_2(\text{g})$

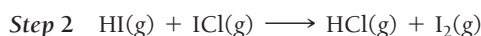
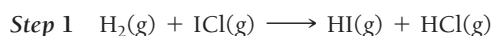
14.7 Reaction Mechanisms

Most chemical reactions do not occur in a single step, but through several steps. When we write a chemical equation to represent a chemical reaction, *we usually represent the overall reaction, not the series of individual steps by which the reaction occurs*. Consider the reaction in which hydrogen gas reacts with iodine monochloride:



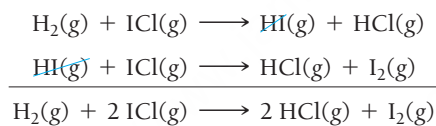
The overall equation shows only the substances present at the beginning of the reaction and the substances formed by the reaction—it does not show the intermediate steps. The **reaction mechanism** is the series of individual chemical steps by which an overall chemical reaction occurs.

For example, the proposed mechanism for the reaction between hydrogen and iodine monochloride contains two steps:



In the first step, an H_2 molecule collides with an ICl molecule and forms an HI molecule and an HCl molecule. In the second step, the HI molecule formed in the first step collides with a second ICl molecule to form another HCl molecule and an I_2 molecule. Each step in a reaction mechanism is an **elementary step**. Elementary steps cannot be broken down into simpler steps—they occur as they are written (they represent the exact species that are colliding in the reaction).

In a valid reaction mechanism, the individual steps in the mechanism add to the overall reaction. For example, the mechanism just shown sums to the overall reaction as shown here:

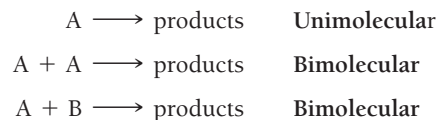


Notice that the HI molecule appears in the reaction mechanism but not in the overall reaction equation. We call species such as HI *reaction intermediates*. A **reaction intermediate** forms in one elementary step and is consumed in another. The reaction mechanism is a complete, detailed description of the reaction at the molecular level—it specifies the individual collisions and reactions that result in the overall reaction. As such, reaction mechanisms are highly sought-after pieces of chemical knowledge.

How do we determine reaction mechanisms? Recall from the opening section of this chapter that chemical kinetics are not only practically important (because they allow us to control the rate of a particular reaction), but also theoretically important because they can help us determine the mechanism of the reaction. We can piece together possible reaction mechanisms by measuring the kinetics of the overall reaction and working backward to write a mechanism consistent with the measured kinetics.

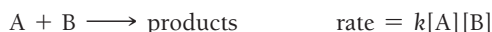
Rate Laws for Elementary Steps

We characterize elementary steps by **molecularity**, the number of reactant particles involved in the step. The most common molecularities are **unimolecular** and **bimolecular**:



Elementary steps in which three reactant particles collide, called **termolecular** steps, are very rare because the probability of three particles simultaneously colliding is small.

Although we cannot deduce the rate law for an *overall chemical reaction* from the balanced chemical equation, we can deduce the rate law for an *elementary step* from its equation. Since we know that an elementary step occurs through the collision of the reactant particles, the rate is proportional to the product of the concentrations of those particles. For example, the rate for the bimolecular elementary step in which A reacts with B is proportional to the concentration of A multiplied by the concentration of B :



An elementary step represents an actual interaction between the reactant molecules in the step. An overall reaction equation shows only the starting substances and the ending substances, not the path between them.

Similarly, the rate law for the bimolecular step in which A reacts with A is proportional to the square of the concentration of A:



Table 14.3 summarizes the rate laws for the common elementary steps, as well as those for the rare termolecular step. Notice that the molecularity of the elementary step is equal to the overall order of the step.

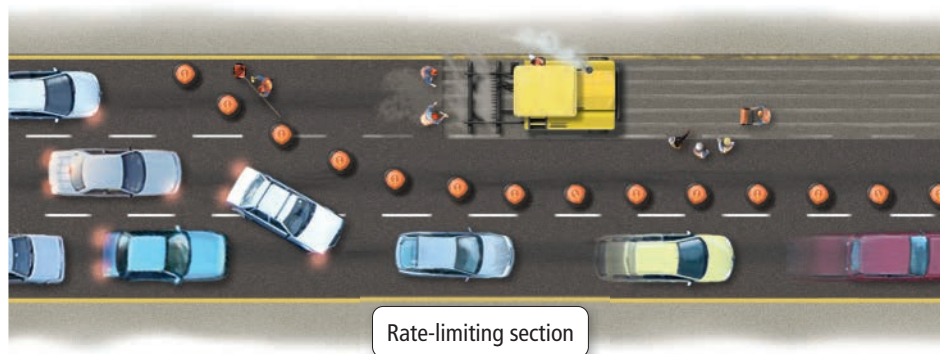
TABLE 14.3 Rate Laws for Elementary Steps

Elementary Step	Molecularity	Rate Law
$A \longrightarrow \text{products}$	1	$\text{Rate} = k[A]$
$A + A \longrightarrow \text{products}$	2	$\text{Rate} = k[A]^2$
$A + B \longrightarrow \text{products}$	2	$\text{Rate} = k[A][B]$
$A + A + A \longrightarrow \text{products}$	3 (rare)	$\text{Rate} = k[A]^3$
$A + A + B \longrightarrow \text{products}$	3 (rare)	$\text{Rate} = k[A]^2[B]$
$A + B + C \longrightarrow \text{products}$	3 (rare)	$\text{Rate} = k[A][B][C]$

Rate-Determining Steps and Overall Reaction Rate Laws

In most chemical reactions, one of the elementary steps—the **rate-determining step**—is much slower than the others. The rate-determining step (also called the rate-limiting step) in a chemical reaction is analogous to the narrowest section on a freeway. If a section of a freeway narrows from four lanes to two lanes, for even a short distance, the rate at which cars travel along the freeway is limited by the rate at which they can travel through the narrow section (even though the rate might be much faster along the four-lane section). Similarly, the rate-determining step in a reaction mechanism limits the overall rate of the reaction (even though the other steps occur much faster) and therefore determines *the rate law for the overall reaction*.

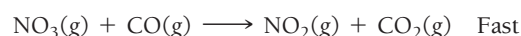
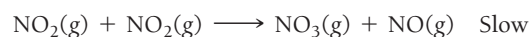
► The rate-determining step in a reaction mechanism limits the overall rate of the reaction just as the narrowest section of a highway limits the rate at which traffic can pass.



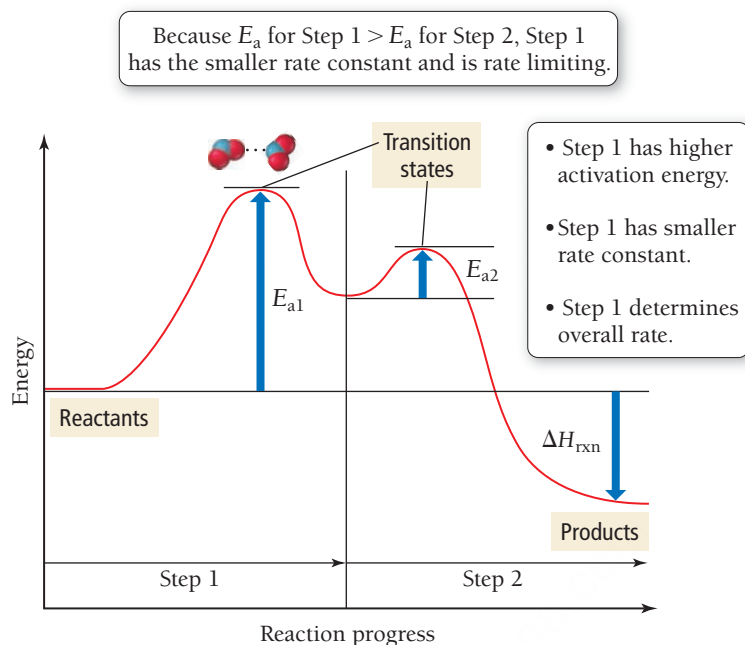
As an example, consider the reaction between nitrogen dioxide gas and carbon monoxide gas:



The experimentally determined rate law for this reaction is $\text{rate} = k[\text{NO}_2]^2$. We can see from this rate law that the reaction must not be a single-step reaction—otherwise the rate law would be $\text{rate} = k[\text{NO}_2][\text{CO}]$. A possible mechanism for this reaction involves two steps:



Energy Diagram for a Two-Step Mechanism



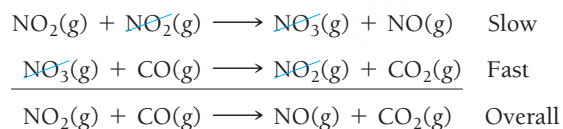
◀ **FIGURE 14.16** Energy Diagram for a Two-Step Mechanism

Figure 14.16 ▲ is the energy diagram for this mechanism. The first step has a much larger activation energy than the second step. This greater activation energy results in a much smaller rate constant for the first step compared to the second step. The first step determines the overall rate of the reaction, and the predicted *overall* rate law is therefore $\text{Rate} = k[\text{NO}_2]^2$, which is consistent with the observed experimental rate law.

For a proposed reaction mechanism, such as the one shown in Figure 14.16 for NO_2 and CO , to be *valid* (mechanisms can only be validated, not proven), two conditions must be met:

1. The elementary steps in the mechanism must sum to the overall reaction.
2. The rate law predicted by the mechanism must be consistent with the experimentally observed rate law.

We have already seen that the rate law predicted by the earlier mechanism is consistent with the experimentally observed rate law. We can check whether the elementary steps sum to the overall reaction by adding them together:



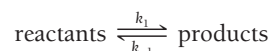
The mechanism fulfills both of the given requirements and is therefore valid. A valid mechanism is not a *proven* mechanism (because other mechanisms may also fulfill both of the given requirements). We can only say that a given mechanism is consistent with kinetic observations of the reaction and therefore possible. Other types of data—such as the experimental evidence for a proposed intermediate—are necessary to further strengthen the validity of a proposed mechanism.

Mechanisms with a Fast Initial Step

When the proposed mechanism for a reaction has a slow initial step—like the one shown for the reaction between NO_2 and CO —the rate law predicted by the mechanism normally contains only reactants involved in the overall reaction. However, when a mechanism begins with a fast initial step, some other subsequent step in the mechanism is the rate-limiting step. In these cases, the rate law predicted by the rate-limiting step may contain reaction intermediates. Since reaction intermediates do not appear in the

overall reaction equation, a rate law containing intermediates cannot generally correspond to the experimental rate law. Fortunately, however, we can often express the concentration of intermediates in terms of the concentrations of the reactants of the overall reaction.

In a multistep mechanism where the first step is fast, the products of the first step may build up because the rate at which they are consumed is limited by some slower step further down the line. As those products build up, they can begin to react with one another to re-form the reactants. As long as the first step is fast enough compared to the rate-limiting step, the first-step reaction will reach equilibrium. We indicate equilibrium as follows:

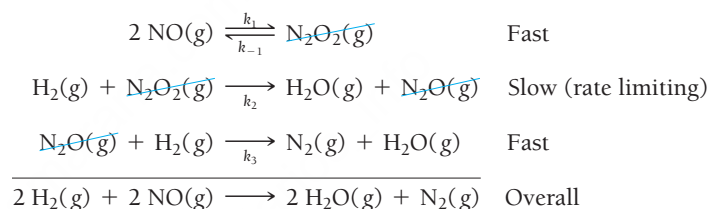


The double arrows indicate that both the forward reaction and the reverse reaction occur. If equilibrium is reached, then the rate of the forward reaction equals the rate of the reverse reaction.

As an example, consider the reaction by which hydrogen reacts with nitrogen monoxide to form water and nitrogen gas:



The experimentally observed rate law is $\text{rate} = k[\text{H}_2][\text{NO}]^2$. The reaction is first order in hydrogen and second order in nitrogen monoxide. The proposed mechanism has a slow second step:



To determine whether the mechanism is valid, we must determine whether the two conditions described previously are met. As you can see, the steps do indeed sum to the overall reaction, so the first condition is met.

The second condition is that the rate law predicted by the mechanism must be consistent with the experimentally observed rate law. Because the second step is rate limiting, we write the following expression for the rate law:

$$\text{rate} = k_2[\text{H}_2][\text{N}_2\text{O}_2] \quad [14.28]$$

This rate law contains an intermediate (N_2O_2) and can therefore not be consistent with the experimentally observed rate law (which does not contain intermediates). Because of the equilibrium in the first step, however, we can express the concentration of the intermediate in terms of the reactants of the overall equation. The first step reaches equilibrium, so the rate of the forward reaction in the first step equals the rate of the reverse reaction:

$$\text{rate (forward)} = \text{rate (reverse)}$$

The rate of the forward reaction is given by the rate law:

$$\text{rate} = k_1[\text{NO}]^2$$

The rate of the reverse reaction is given by the rate law:

$$\text{rate} = k_{-1}[\text{N}_2\text{O}_2]$$

Since these two rates are equal at equilibrium, we write the expression:

$$k_1[\text{NO}]^2 = k_{-1}[\text{N}_2\text{O}_2]$$

Rearranging, we get:

$$[\text{N}_2\text{O}_2] = \frac{k_1}{k_{-1}}[\text{NO}]^2$$

We can now substitute this expression into Equation 14.28, the rate law obtained from the slow step:

$$\begin{aligned} \text{rate} &= k_2[\text{H}_2][\text{N}_2\text{O}_2] \\ &= k_2[\text{H}_2]\frac{k_1}{k_{-1}}[\text{NO}]^2 \\ &= \frac{k_2k_1}{k_{-1}}[\text{H}_2][\text{NO}]^2 \end{aligned}$$

If we combine the individual rate constants into one overall rate constant, we get the predicted rate law:

$$\text{rate} = k[\text{H}_2][\text{NO}]^2 \tag{14.29}$$

Since this rate law is consistent with the experimentally observed rate law, the second condition is met and the proposed mechanism is valid.

EXAMPLE 14.9

Reaction Mechanisms

Interactive
Worked Example
Video 14.9

PEARSON
eText
2.0

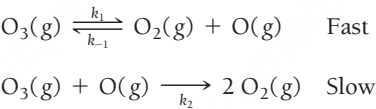
Ozone naturally decomposes to oxygen by this reaction:



The experimentally observed rate law for this reaction is:

$$\text{rate} = k[\text{O}_3]^2[\text{O}_2]^{-1}$$

Show that this proposed mechanism is consistent with the experimentally observed rate law:



SOLUTION

To determine whether the mechanism is valid, you must first determine whether the steps sum to the overall reaction. The steps do indeed sum to the overall reaction, so the first condition is met.	$\begin{array}{l} \text{O}_3(\text{g}) \overset{k_1}{\underset{k_{-1}}{\rightleftharpoons}} \text{O}_2(\text{g}) + \text{O}(\text{g}) \\ \text{O}_3(\text{g}) + \text{O}(\text{g}) \xrightarrow{k_2} 2 \text{O}_2(\text{g}) \\ \hline 2 \text{O}_3(\text{g}) \longrightarrow 3 \text{O}_2(\text{g}) \end{array}$
The second condition is that the rate law predicted by the mechanism must be consistent with the experimentally observed rate law. Because the second step is rate limiting, write the rate law based on the second step.	$\text{rate} = k_2[\text{O}_3][\text{O}]$
Because the rate law contains an intermediate (O), you must express the concentration of the intermediate in terms of the concentrations of the reactants of the overall reaction. To do this, set the rates of the forward reaction and the reverse reaction of the first step equal to each other. Solve the expression from the previous step for [O], the concentration of the intermediate.	$\begin{aligned} \text{rate (forward)} &= \text{rate (reverse)} \\ k_1[\text{O}_3] &= k_{-1}[\text{O}_2][\text{O}] \\ [\text{O}] &= \frac{k_1[\text{O}_3]}{k_{-1}[\text{O}_2]} \end{aligned}$

—Continued on the next page

Continued from the previous page—

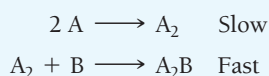
Finally, substitute $[O]$ into the rate law predicted by the slow step, and combine the rate constants into one overall rate constant, k .

$$\begin{aligned}\text{rate} &= k_2[O_3][O] \\ &= k_2[O_3] \frac{k_1[O_3]}{k_{-1}[O_2]} \\ &= k_2 \frac{k_1[O_3]^2}{k_{-1}[O_2]} \\ &= k[O_3]^2[O_2]^{-1}\end{aligned}$$

CHECK Because the two steps in the proposed mechanism sum to the overall reaction, and because the rate law obtained from the proposed mechanism is consistent with the experimentally observed rate law, the proposed mechanism is valid. The -1 reaction order with respect to $[O_2]$ indicates that the rate slows down as the concentration of oxygen increases—oxygen inhibits, or slows down, the reaction.

FOR PRACTICE 14.9

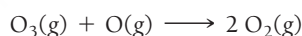
Predict the overall reaction and rate law that results from the following two-step mechanism:




14.8 Catalysis

Throughout this chapter, we have discussed ways to control the rates of chemical reactions. We can speed up the rate of a reaction by increasing the concentration of the reactants or by increasing the temperature. However, these approaches are not always feasible. There are limits to how concentrated we can make a reaction mixture, and increases in temperature may allow unwanted reactions—such as the decomposition of a reactant—to occur.

Alternatively, reaction rates can be increased by using a **catalyst**, a substance that increases the rate of a chemical reaction but is not consumed by the reaction. A catalyst works by providing an alternative mechanism for the reaction—one in which the rate-determining step has a lower activation energy. For example, consider the noncatalytic destruction of ozone in the upper atmosphere, which happens according to this reaction:



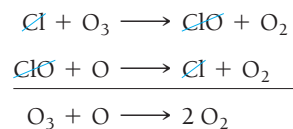
In this reaction, an ozone molecule collides with an oxygen atom to form two oxygen molecules in a single elementary step. The reason that Earth has a protective ozone layer in the upper atmosphere is that the activation energy for this reaction is fairly high and the reaction, therefore, proceeds at a fairly slow rate; the ozone layer does not rapidly decompose into O_2 . However, the addition of Cl atoms (which come from the photodissociation of human-made chlorofluorocarbons) to the upper atmosphere makes available another pathway by which O_3 can be destroyed. The first step in this pathway—called the catalytic destruction of ozone—is the reaction of Cl with O_3 to form ClO and O_2 :



This is followed by a second step in which ClO reacts with O, regenerating Cl:

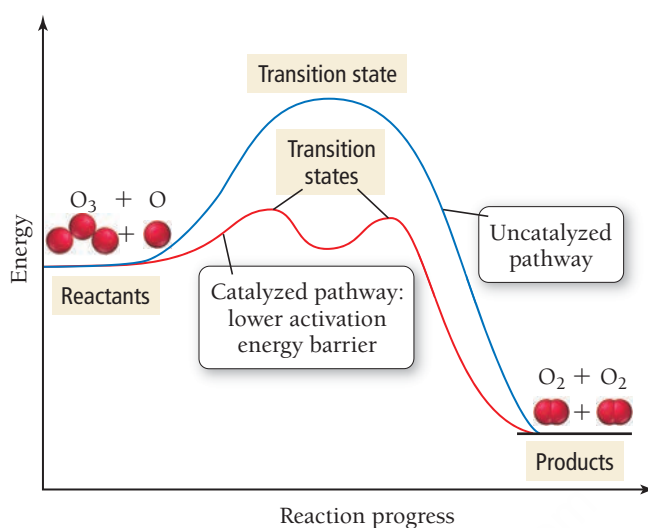


If we add the two reactions, the overall reaction is identical to the noncatalytic reaction:



Photodissociation means *light-induced* dissociation. The energy from a photon of light can break chemical bonds and therefore dissociate, or break apart, a molecule.

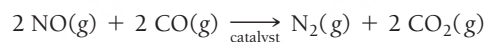
Energy Diagram for Catalyzed and Uncatalyzed Pathways



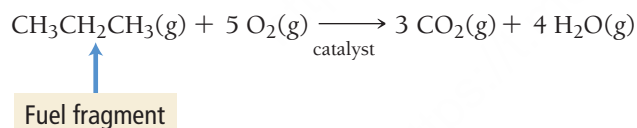
► **FIGURE 14.17 Catalyzed and Uncatalyzed Decomposition of Ozone** In the catalytic destruction of ozone (red line), the activation barrier for the rate-limiting step is much lower than in the uncatalyzed process (blue line).

However, the activation energy for the rate-limiting step in this pathway is much smaller than for the first, uncatalyzed pathway (**Figure 14.17** ▲); therefore, the reaction occurs at a much faster rate. Note that the Cl is not consumed in the overall reaction—this is characteristic of a catalyst.

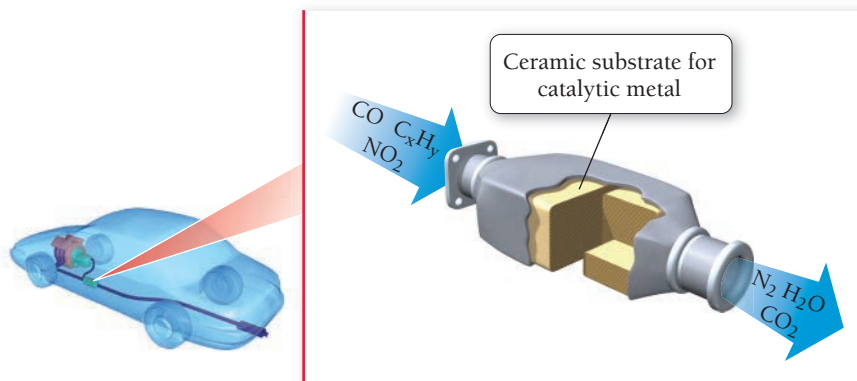
In the case of the catalytic destruction of ozone, the catalyst speeds up a reaction that we *do not* want to happen. Most of the time, however, catalysts are used to speed up reactions that we *do* want to happen. For example, most cars have a catalytic converter in their exhaust systems. The catalytic converter contains solid catalysts, such as platinum, rhodium, or palladium, dispersed on an underlying high-surface-area ceramic structure. These catalysts convert exhaust pollutants such as nitrogen monoxide and carbon monoxide into less harmful substances:



The catalytic converter also promotes the complete combustion of any fuel fragments present in the exhaust:



Fuel fragments in exhaust are harmful because they lead to the formation of ozone. Although ozone is a natural part of our *upper* atmosphere that protects us from excess exposure to ultraviolet light, it is a pollutant in the *lower* atmosphere, interfering with cardiovascular function and acting as an eye and



◀ The catalytic converter in the exhaust system of a car helps eliminate pollutants in the exhaust.

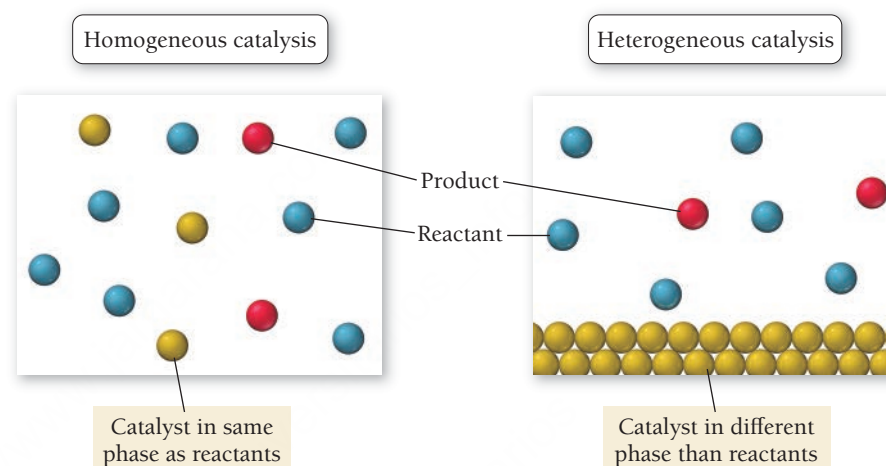
TABLE 14.4 Change in Pollutant Levels

Pollutant	Change 1980–2010
NO ₂	–52%
O ₃	–28%
CO	–82%

lung irritant. The use of catalytic converters in motor vehicles has resulted in lower levels of these pollutants over most U.S. cities in the last 30 years, even though the number of cars on the roadways has dramatically increased (see Table 14.4).

Homogeneous and Heterogeneous Catalysis

We categorize catalysis into two types: homogeneous and heterogeneous (**Figure 14.18 ▼**). In **homogeneous catalysis**, the catalyst exists in the same phase (or state) as the reactants. The catalytic destruction of ozone by Cl is an example of homogeneous catalysis—the chlorine atoms exist in the gas phase with the gas-phase reactants. In **heterogeneous catalysis**, the catalyst exists in a different phase than the reactants. The catalysts used in catalytic converters are examples of heterogeneous catalysts—they are solids while the reactants are gases. The use of solid catalysts with gas-phase or solution-phase reactants is the most common type of heterogeneous catalysis.



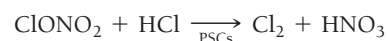
▲ FIGURE 14.18 Homogeneous and Heterogeneous Catalysis Often a heterogeneous catalyst provides a solid surface on which the reaction can take place.



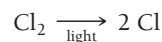
▲ Polar stratospheric clouds contain ice particles that catalyze reactions by which chlorine is released from its atmospheric chemical reservoirs.

Research has shown that heterogeneous catalysis is most likely responsible for the annual formation of an ozone hole over Antarctica. After the discovery of the Antarctic ozone hole in 1985, scientists wondered why there was such a dramatic drop in ozone over Antarctica but not over the rest of the planet. After all, the chlorine from chlorofluorocarbons that catalyzes ozone destruction is evenly distributed throughout the entire atmosphere.

As it turns out, most of the chlorine that enters the atmosphere from chlorofluorocarbons gets bound up in chlorine reservoirs, substances such as ClONO₂ that hold chlorine and prevent it from catalyzing ozone destruction. The unique conditions over Antarctica—especially the cold isolated air mass that exists during the long dark winter—result in clouds that contain solid ice particles. These unique clouds are called polar stratospheric clouds (or PSCs), and the surfaces of the ice particles within these clouds appear to catalyze the release of chlorine from their reservoirs:

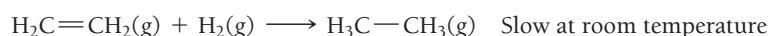


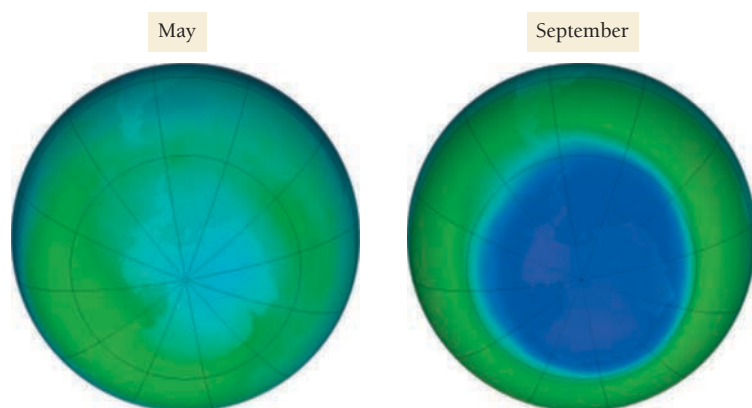
When the sun rises in the Antarctic spring, the sunlight dissociates the chlorine molecules into chlorine atoms:



The chlorine atoms then catalyze the destruction of ozone by the mechanism discussed previously. This continues until the sun melts the stratospheric clouds, allowing chlorine atoms to be reincorporated into their reservoirs. The result is an ozone hole that forms every spring and lasts about 6 to 8 weeks (**Figure 14.19 ►**).

A second example of heterogeneous catalysis involves the **hydrogenation** of double bonds within alkenes. Consider the reaction between ethene and hydrogen, which is relatively slow at normal temperatures:



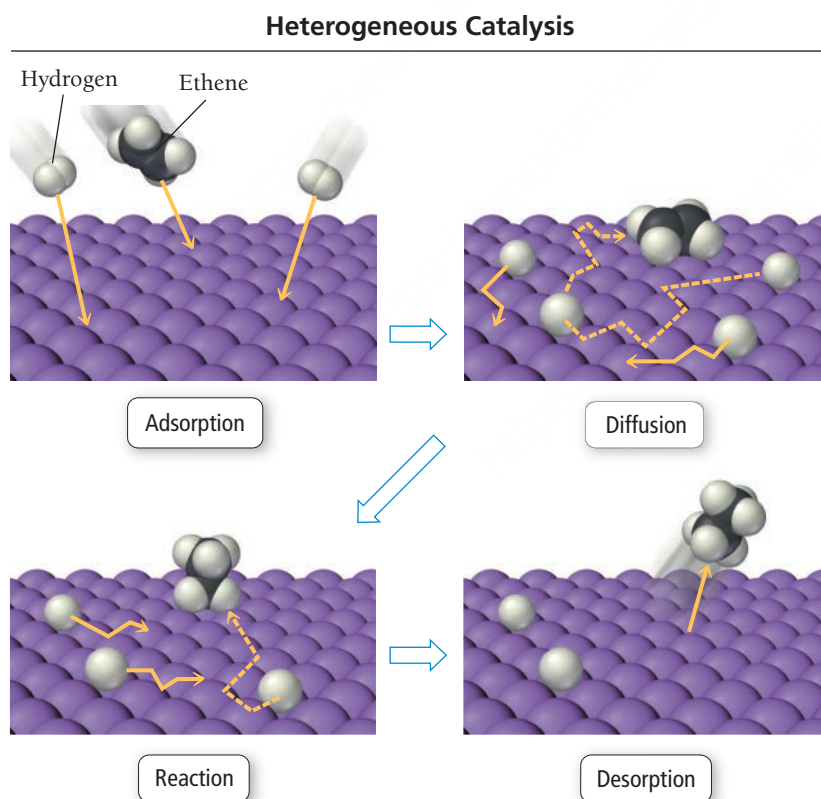


◀ **FIGURE 14.19 Ozone Depletion in the Antarctic Spring** The concentration of ozone over Antarctica drops sharply during the months of September and October due to the catalyzed destruction of ozone by chlorine. The image at the left shows the average ozone levels in May 2015 while the image at the right shows the average levels from September 2015. (The lowest ozone levels are represented in purple.)

However, in the presence of finely divided platinum, palladium, or nickel, the reaction happens rapidly. The catalysis occurs by the four-step process depicted in **Figure 14.20** ▼.

1. Adsorption: the reactants are adsorbed onto the metal surface.
2. Diffusion: the reactants diffuse on the surface until they approach each other.
3. Reaction: the reactants react to form the products.
4. Desorption: the products desorb from the surface into the gas phase.

The large activation energy of the hydrogenation reaction—due primarily to the strength of the hydrogen–hydrogen bond in H_2 which must be broken—is greatly lowered when the reactants adsorb onto the surface.



◀ **FIGURE 14.20 Catalytic Hydrogenation of Ethene**

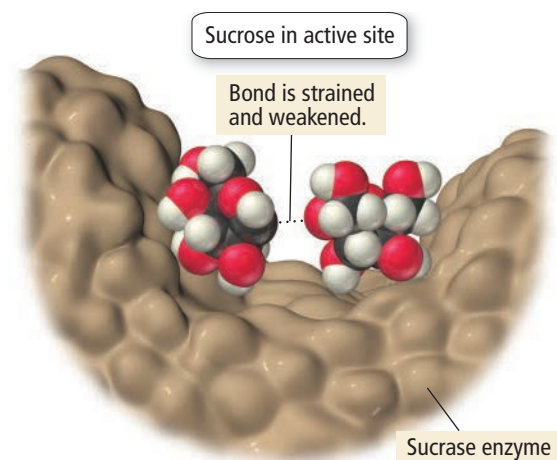
Enzymes: Biological Catalysts

We find perhaps the best example of chemical catalysis in living organisms. Most of the thousands of reactions that must occur for an organism to survive are too slow at normal temperatures. So living organisms rely on **enzymes**, biological catalysts that increase the rates of biochemical reactions.

The strategies used to speed up chemical reactions in the laboratory—high temperatures, high pressures, strongly acidic or alkaline conditions—are not available to living organisms because those strategies would be fatal to cells.

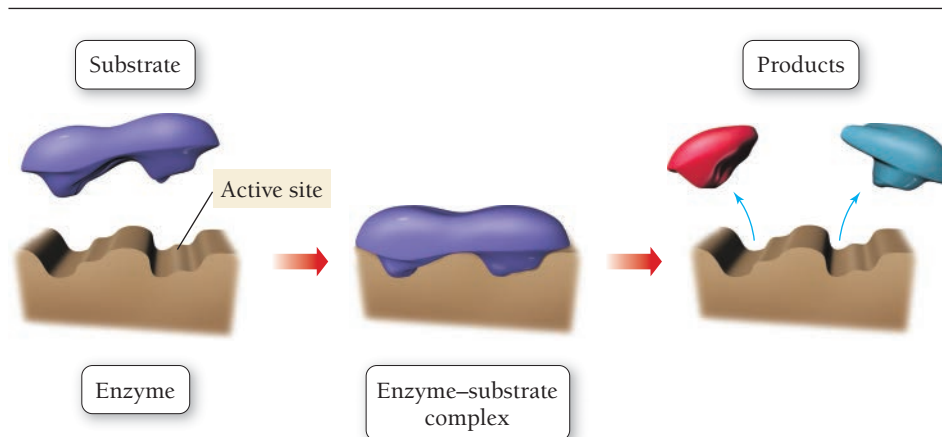
► **FIGURE 14.21** Enzyme–Substrate

Binding A substrate (or reactant) fits into the active site of an enzyme much as a key fits into a lock. It is held in place by intermolecular forces and forms an enzyme–substrate complex. (Sometimes temporary covalent bonding may also be involved.) After the reaction occurs, the products are released from the active site.

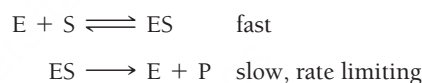


▲ FIGURE 14.22 An Enzyme-Catalyzed Reaction Sucrase catalyzes the conversion of sucrose into glucose and fructose by weakening the bond that joins the two rings.

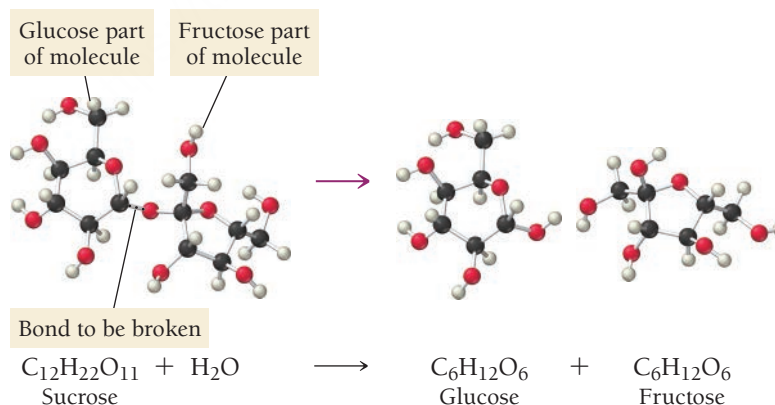
Enzyme-Substrate Binding



Enzymes are usually large protein molecules with complex three-dimensional structures. Within each enzyme's structure is a specific area called the **active site**. The properties and shape of the active site are just right to bind the reactant molecule, usually called the **substrate**. The substrate fits into the active site in a manner that is analogous to a key fitting into a lock (**Figure 14.21 ▲**). When the substrate binds to the active site of the enzyme—through intermolecular forces such as hydrogen bonding and dispersion forces, or even covalent bonds—the activation energy of the reaction is greatly lowered, allowing the reaction to occur at a much faster rate. The general mechanism by which an enzyme (E) binds a substrate (S) and then reacts to form the products (P) is:



Sucrase is an enzyme that catalyzes the breaking up of sucrose (table sugar) into glucose and fructose within the body. At body temperature, sucrose does not break into glucose and fructose because the activation energy is high, resulting in a slow reaction rate. However, when a sucrose molecule binds to the active site within sucrase, the bond between the glucose and fructose units weakens because glucose is forced into a geometry that stresses the bond (**Figure 14.22** ◀). Weakening of this bond lowers the activation energy for the reaction, increasing the reaction rate. The reaction can then proceed toward equilibrium—which favors the products—at a much lower temperature.



- ▶ Sucrose breaks up into glucose and fructose during digestion.

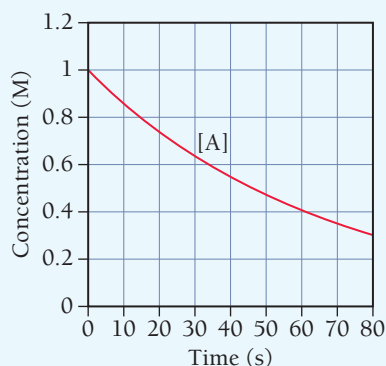
By allowing otherwise slow reactions to occur at reasonable rates, enzymes give living organisms tremendous control over which reactions occur and when they occur. Enzymes are extremely specific (each enzyme catalyzes only a single reaction) and efficient, speeding up reaction rates by factors of as much as a billion. To turn a particular reaction on, a living organism produces or activates the correct enzyme to catalyze that reaction. Because organisms are so dependent on the reactions enzymes catalyze, many substances that inhibit the action of enzymes are highly toxic. Locking up a single enzyme molecule can stop the reaction of billions of substrates, much as one motorist stalled at a tollbooth can paralyze an entire highway full of cars.

SELF-ASSESSMENT

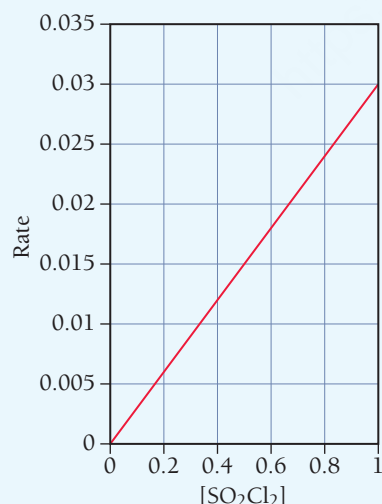
QUIZ

PEARSON
eText
2.0

1. This graph shows the concentration of the reactant A in the reaction $A \longrightarrow B$. Determine the average rate of the reaction between 0 and 10 seconds.



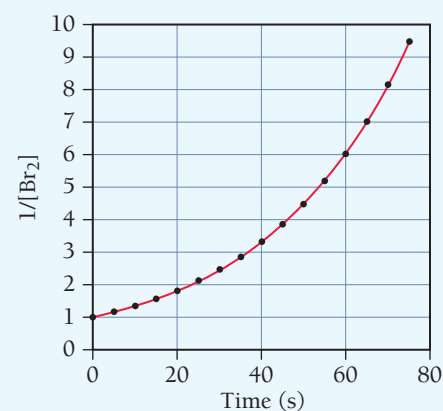
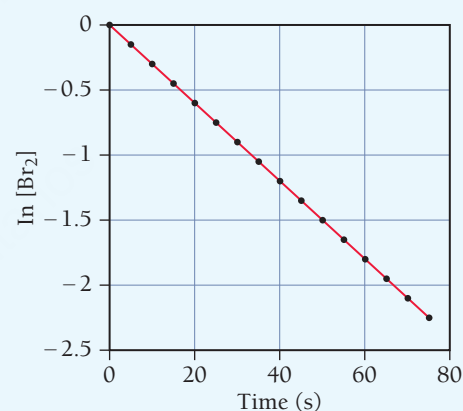
- a) 0.07 M/s b) 0.007 M/s c) 0.86 M/s d) 0.014 M/s
2. Dinitrogen monoxide decomposes into nitrogen and oxygen when heated. The initial rate of the reaction is 0.022 M/s. What is the initial rate of change of the concentration of N_2O (that is, $\Delta[N_2O]/\Delta t$)?
- $$2 N_2O(g) \longrightarrow 2 N_2(g) + O_2(g)$$
- a) -0.022 M/s b) -0.011 M/s
c) -0.044 M/s d) +0.022 M/s
3. This plot shows the rate of the decomposition of SO_2Cl_2 into SO_2 and Cl_2 as a function of the concentration of SO_2Cl_2 . What is the order of the reaction?



- a) first order
b) second order
c) zero order
d) Order cannot be determined without more information.
4. For the reaction $2 A + B \longrightarrow C$, the initial rate is measured at several different reactant concentrations. From the tabulated data, determine the rate law for the reaction.

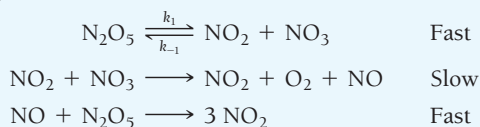
[A] (M)	[B] (M)	Initial Rate (M/s)
0.05	0.05	0.035
0.10	0.05	0.070
0.20	0.10	0.56

- a) rate = $k[A][B]$ b) rate = $k[A]^2[B]$
c) rate = $k[A][B]^2$ d) rate = $k[A]^2[B]^2$
5. What is the rate constant for the reaction in Question 4?
- a) $2.8 \times 10^2 M^{-2} \cdot s^{-1}$ b) $14 M^{-2} \cdot s^{-1}$
c) $1.4 \times 10^2 M^{-2} \cdot s^{-1}$ d) $1.4 \times 10^3 M^{-2} \cdot s^{-1}$
6. The decomposition of Br_2 is followed as a function of time; two different plots of the data are shown here. Determine the order and rate constant for the reaction.

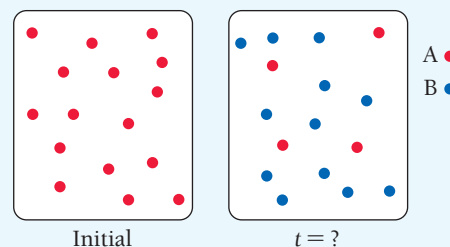


- a) first order; $0.030 s^{-1}$ b) first order; $33.3 s^{-1}$
c) second order; $0.045 M^{-1} \cdot s^{-1}$ d) second order; $22.2 M^{-1} \cdot s^{-1}$
7. The reaction $X \longrightarrow \text{products}$ is second order in X and has a rate constant of $0.035 M^{-1} s^{-1}$. If a reaction mixture is initially 0.45 M in X, what is the concentration of X after 155 seconds?
- a) 7.6 M b) $2.0 \times 10^{-3} M$
c) 0.13 M d) 0.00 M

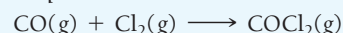
8. A decomposition reaction has a half-life that does not depend on the initial concentration of the reactant. What is the order of the reaction?
- zero order
 - first order
 - second order
 - Order cannot be determined without more information.
9. The rate constant of a reaction is measured at different temperatures. A plot of the natural log of the rate constant as a function of the inverse of the temperature (in kelvins) yields a straight line with a slope of $-8.55 \times 10^3 \text{ K}^{-1}$. What is the activation energy (E_a) for the reaction?
- 71 kJ
 - 71 kJ
 - 1.0 kJ
 - 1.0 kJ
10. The rate constant for a reaction at 25.0°C is 0.010 s^{-1} and its activation energy is 35.8 kJ/mol . Find the rate constant at 50.0°C .
- 0.021 s^{-1}
 - 0.010 s^{-1}
 - 0.0033 s^{-1}
 - 0.031 s^{-1}
11. The mechanism shown here is proposed for the gas-phase reaction, $2 \text{N}_2\text{O}_5 \longrightarrow 4 \text{NO}_2 + \text{O}_2$. What rate law does the mechanism predict?



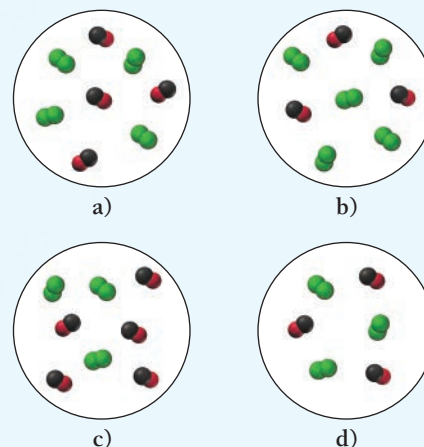
- rate = $k[\text{N}_2\text{O}_5]$
 - rate = $k[\text{N}_2\text{O}_5]^2$
 - rate = $k[\text{N}_2\text{O}_5]^0$
 - rate = $k[\text{NO}_2][\text{NO}_3]$
12. Which statement is true regarding the function of a catalyst in a chemical reaction?
- A catalyst increases the rate of a reaction.
 - A catalyst provides an alternate mechanism for the reaction.
 - A catalyst is not consumed by the reaction.
 - All of the above are true.
13. These images represent the first-order reaction $\text{A} \longrightarrow \text{B}$ initially and at some later time. The rate law for the reaction is $\text{Rate} = 0.010 \text{ s}^{-1} [\text{A}]$. How much time has passed between the two images?



- 69 s
 - 139 s
 - 60 s
 - 12.5 s
14. Pick the single-step reaction which, according to collision theory, is likely to have the smallest orientation factor.
- $\text{H} + \text{H} \longrightarrow \text{H}_2$
 - $\text{I} + \text{HI} \longrightarrow \text{I}_2 + \text{H}$
 - $\text{H}_2 + \text{H}_2\text{C}=\text{CH}_2 \longrightarrow \text{H}_3\text{C} \longrightarrow \text{CH}_3$
 - All of these reactions have the same orientation factor.
15. Carbon monoxide and chlorine gas react to form phosgene (COCl_2) according to the equation:



The rate law for the reaction is $\text{rate} = k[\text{Cl}_2]^{3/2}[\text{CO}]$. Which mixture of chlorine gas and carbon monoxide gas has the fastest initial rate?



Answers: 1. d; 2. c; 3. a; 4. c; 5. a; 6. a; 7. c; 8. b; 9. b; 10. d; 11. a; 12. d; 13. b; 14. c; 15. b

CHAPTER SUMMARY

14

MasteringChemistry™ provides end-of-chapter exercises, feedback-enriched tutorial problems, animations, and interactive activities to encourage problem solving practice and deeper understanding of key concepts and topics.

REVIEW

KEY LEARNING OUTCOMES

CHAPTER OBJECTIVES

ASSESSMENT

Express Reaction Rates (14.3)

- Example 14.1 For Practice 14.1 Exercises 27–36

Determine the Order, Rate Law, and Rate Constant of a Reaction (14.4)

- Example 14.2 For Practice 14.2 Exercises 43–46

Use Graphical Analysis of Reaction Data to Determine Reaction Order and Rate Constants (14.5)

- Examples 14.3, 14.5 For Practice 14.3, 14.5 Exercises 49–54

Determine the Concentration of a Reactant at a Given Time (14.5)	• Example 14.4 For Practice 14.4 Exercises 53–56
Work with the Half-Life of a Reaction (14.5)	• Example 14.6 For Practice 14.6 Exercises 55–58
Use the Arrhenius Equation to Determine Kinetic Parameters (14.6)	• Examples 14.7, 14.8 For Practice 14.7, 14.8 Exercises 61–72
Determine whether a Reaction Mechanism Is Valid (14.7)	• Example 14.9 For Practice 14.9 Exercises 75–78

KEY TERMS

Section 14.4

rate law (593)
rate constant (k) (593)
reaction order (n) (593)
overall order (595)

Section 14.5

integrated rate law (599)
half-life ($t_{1/2}$) (603)

Section 14.6

Arrhenius equation (606)
activation energy (E_a) (606)
frequency factor (A) (606)
activated complex (transition state) (607)
exponential factor (607)
Arrhenius plot (608)
collision model (611)
orientation factor (611)
collision frequency (611)

Section 14.7

reaction mechanism (613)
elementary step (613)
reaction intermediate (613)
molecularity (613)
unimolecular (613)
bimolecular (613)
termolecular (613)
rate-determining step (614)

Section 14.8

catalyst (618)
homogeneous catalysis (620)
heterogeneous catalysis (620)
hydrogenation (620)
enzyme (621)
active site (622)
substrate (622)

KEY CONCEPTS

Reaction Rates (14.1–14.3)

- The rate of a chemical reaction is a measure of how fast a reaction occurs. The rate reflects the change in the concentration of a reactant or product per unit time and is usually reported in units of M/s.
- Reaction rates generally depend on the concentration of the reactants, the temperature at which the reaction occurs, and the structure of the reactants.

Reaction Rate Laws and Orders (14.4)

- The rate of a first-order reaction is directly proportional to the concentration of the reactant, the rate of a second-order reaction is proportional to the square of the concentration of the reactant, and the rate of a zero-order reaction is independent of the concentration of the reactant.
- For a reaction with more than one reactant, the order with respect to each reactant is, in general, independent of the order with respect to other reactants. The rate law shows the relationship between the rate and the concentrations of each reactant and must be determined experimentally.

Integrated Rate Laws and Half-Life (14.5)

- The rate law for a reaction describes the relationship between the rate of the reaction and the concentrations of the reactants.
- The integrated rate law for a reaction describes the relationship between the concentration of a reactant and time.
- The integrated rate law for a zero-order reaction shows that the concentration of the reactant varies linearly with time. For a first-order reaction, the *natural log* of the concentration of the reactant varies linearly with time, and for a second-order reaction, the *inverse* of the concentration of the reactant varies linearly with time.
- The half-life of a reaction can be derived from the integrated rate law and represents the time required for the concentration of a reactant to fall to one-half of its initial value. The half-life of a first-order reaction is *independent* of initial concentration of the reactant. The half-life of a zero-order or second-order reaction *depends* on the initial concentration of reactant.

The Effect of Temperature on Reaction Rate (14.6)

- The rate constant of a reaction generally depends on temperature and can be expressed by the Arrhenius equation, which consists of a frequency factor and an exponential factor.
- The frequency factor represents the number of times that the reactants approach the activation barrier per unit time. The exponential factor is the fraction of approaches that are successful in surmounting the activation barrier and forming products.
- The exponential factor depends on both the temperature and the activation energy, a barrier that the reactants must overcome to become products. The exponential factor increases with increasing temperature but decreases with increasing activation energy.
- We can determine the frequency factor and activation energy for a reaction by measuring the rate constant at different temperatures and constructing an Arrhenius plot.
- For reactions in the gas phase, Arrhenius behavior can be described with the collision model. In this model, reactions occur as a result of sufficiently energetic collisions. The colliding molecules must be oriented in such a way that the reaction can occur. The frequency factor contains two terms: p , which represents the fraction of collisions that have the proper orientation, and z , which represents the number of collisions per unit time.

Reaction Mechanisms (14.7)

- Most chemical reactions occur in several steps. The series of individual steps by which a reaction occurs is the reaction mechanism.
- In order for a proposed reaction mechanism to be valid, it must fulfill two conditions: (a) the steps must sum to the overall reaction, and (b) the mechanism must predict the experimentally observed rate law.
- For mechanisms with a slow initial step, we derive the rate law from the slow step.
- For mechanisms with a fast initial step, we first write the rate law based on the slow step but then assume that the fast steps reach equilibrium, so we can write concentrations of intermediates in terms of the reactants.

Catalysis (14.8)

- A catalyst is a substance that increases the rate of a chemical reaction by providing an alternative mechanism that has a lower activation energy for the rate-determining step.
- Catalysts can be homogeneous or heterogeneous. A homogeneous catalyst exists in the same phase as the reactants and forms a

homogeneous mixture with them. A heterogeneous catalyst generally exists in a different phase than the reactants.

- Enzymes are biological catalysts capable of increasing the rate of specific biochemical reactions by many orders of magnitude.

KEY EQUATIONS AND RELATIONSHIPS**The Rate of Reaction (14.3)**

For a reaction $aA + bB \longrightarrow cC + dD$, the rate is defined as

$$\text{rate} = -\frac{1}{a} \frac{\Delta[A]}{\Delta t} = -\frac{1}{b} \frac{\Delta[B]}{\Delta t} = +\frac{1}{c} \frac{\Delta[C]}{\Delta t} = +\frac{1}{d} \frac{\Delta[D]}{\Delta t}$$

The Rate Law (14.4)

$$\begin{aligned} \text{rate} &= k[A]^n && \text{(single reactant)} \\ \text{rate} &= k[A]^m[B]^n && \text{(multiple reactant)} \end{aligned}$$

Integrated Rate Laws and Half-Life (14.5)

Reaction Order	Integrated Rate Law	Units of k	Half-Life Expression
0	$[A]_t = -kt + [A]_0$	$M \cdot s^{-1}$	$t_{1/2} = \frac{[A]_0}{2k}$
1	$\ln[A]_t = -kt + \ln[A]_0$	s^{-1}	$t_{1/2} = \frac{0.693}{k}$
2	$\frac{1}{[A]_t} = kt + \frac{1}{[A]_0}$	$M^{-1} \cdot s^{-1}$	$t_{1/2} = \frac{1}{k[A]_0}$

Arrhenius Equation (14.6)

$$k = Ae^{-E_a/RT}$$

$$\ln k = \frac{E_a}{R} \left(\frac{1}{T} \right) + \ln A \quad \text{(linearized form)}$$

$$\ln \frac{k_2}{k_1} = \frac{E_a}{R} \left(\frac{1}{T_1} - \frac{1}{T_2} \right) \quad \text{(two-point form)}$$

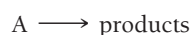
$$k = pze^{-E_a/RT} \quad \text{(collision theory)}$$

Rate Laws for Elementary Steps (14.7)

Elementary Step	Molecularity	Rate Law
$A \longrightarrow \text{products}$	1	$\text{rate} = k[A]$
$A + A \longrightarrow \text{products}$	2	$\text{rate} = k[A]^2$
$A + B \longrightarrow \text{products}$	2	$\text{rate} = k[A][B]$
$A + A + A \longrightarrow \text{products}$	3 (rare)	$\text{rate} = k[A]^3$
$A + A + B \longrightarrow \text{products}$	3 (rare)	$\text{rate} = k[A]^2[B]$
$A + B + C \longrightarrow \text{products}$	3 (rare)	$\text{rate} = k[A][B][C]$

EXERCISES**REVIEW QUESTIONS**

1. Explain why lizards become sluggish in cold weather. How is this phenomenon related to chemistry?
2. Why are reaction rates important (both practically and theoretically)?
3. Using the idea that reactions occur as a result of collisions between particles, explain why reaction rates depend on the concentration of the reactants.
4. Using the idea that reactions occur as a result of collisions between particles, explain why reaction rates depend on the temperature of the reaction mixture.
5. What units are typically used to express the rate of a reaction?
6. Why is the reaction rate for reactants defined as the *negative* of the change in reactant concentration with respect to time, whereas for products it is defined as the change in reactant concentration with respect to time (with a positive sign)?
7. Explain the difference between the average rate of reaction and the instantaneous rate of reaction.
8. Consider a simple reaction in which a reactant A forms products:



What is the rate law if the reaction is zero order with respect to A? First order? Second order? For each case, explain how a doubling of the concentration of A would affect the rate of reaction.

9. How is the order of a reaction generally determined?
10. For a reaction with multiple reactants, how is the overall order of the reaction defined?
11. Explain the difference between the rate law for a reaction and the integrated rate law for a reaction. What relationship does each kind of rate law express?
12. Write integrated rate laws for zero-order, first-order, and second-order reactions of the form $A \longrightarrow \text{products}$.
13. What does the term *half-life* mean? Write the expressions for the half-lives of zero-order, first-order, and second-order reactions.
14. How do reaction rates typically depend on temperature? What part of the rate law is temperature dependent?
15. Explain the meaning of each term within the Arrhenius equation: activation energy, frequency factor, and exponential factor. Use these terms and the Arrhenius equation to explain why small changes in temperature can result in large changes in reaction rates.

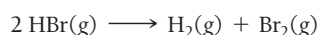
16. What is an Arrhenius plot? Explain the significance of the slope and intercept of an Arrhenius plot.
17. Explain the meaning of the orientation factor in the collision model.
18. Explain the difference between a normal chemical equation for a chemical reaction and the mechanism of that reaction.
19. In a reaction mechanism, what is an elementary step? Write down the three most common elementary steps and the corresponding rate law for each one.
20. What are the two requirements for a proposed mechanism to be valid for a given reaction?
21. What is an intermediate within a reaction mechanism?
22. What is a catalyst? How does a catalyst increase the rate of a chemical reaction?
23. Explain the difference between homogeneous catalysis and heterogeneous catalysis.
24. What are the four basic steps involved in heterogeneous catalysis?
25. What are enzymes? What is the active site of an enzyme? What is a substrate?
26. What is the general two-step mechanism by which most enzymes work?

PROBLEMS BY TOPIC

Note: Answers to all odd-numbered Problems, numbered in blue, can be found in Appendix III. Exercises in the Problems by Topic section are paired, with each odd-numbered problem followed by a similar even-numbered problem. Exercises in the Cumulative Problems section are also paired but more loosely. Because of their nature, Challenge Problems and Conceptual Problems are unpaired.

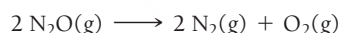
Reaction Rates

27. Consider the reaction.



- a. Express the rate of the reaction in terms of the change in concentration of each of the reactants and products.
- b. In the first 25.0 s of this reaction, the concentration of HBr drops from 0.600 M to 0.512 M. Calculate the average rate of the reaction during this time interval.
- c. If the volume of the reaction vessel in part b is 1.50 L, what amount of Br_2 (in moles) forms during the first 15.0 s of the reaction?

28. Consider the reaction.



- a. Express the rate of the reaction in terms of the change in concentration of each of the reactants and products.
- b. In the first 15.0 s of the reaction, 0.015 mol of O_2 is produced in a reaction vessel with a volume of 0.500 L. What is the average rate of the reaction during this time interval?
- c. Predict the rate of change in the concentration of N_2O during this time interval. In other words, what is $\Delta[\text{N}_2\text{O}]/\Delta t$?

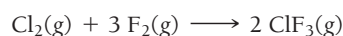
29. For the reaction $2 \text{A(g)} + \text{B(g)} \longrightarrow 3 \text{C(g)}$,

- a. determine the expression for the rate of the reaction in terms of the change in concentration of each of the reactants and products.
- b. when A is decreasing at a rate of 0.100 M/s, how fast is B decreasing? How fast is C increasing?

30. For the reaction $\text{A(g)} + \frac{1}{2} \text{B(g)} \longrightarrow 2 \text{C(g)}$,

- a. determine the expression for the rate of the reaction in terms of the change in concentration of each of the reactants and products.
- b. when C is increasing at a rate of 0.0025 M/s, how fast is B decreasing? How fast is A decreasing?

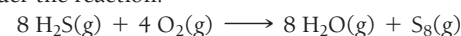
31. Consider the reaction.



Complete the table.

$\Delta[\text{Cl}_2]/\Delta t$	$\Delta[\text{F}_2]/\Delta t$	$\Delta[\text{ClF}_3]/\Delta t$	Rate
-0.012 M/s			

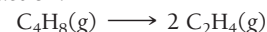
32. Consider the reaction.



Complete the table.

$\Delta[\text{H}_2\text{S}]/\Delta t$	$\Delta[\text{O}_2]/\Delta t$	$\Delta[\text{H}_2\text{O}]/\Delta t$	$\Delta[\text{S}_8]/\Delta t$	Rate
-0.080 M/s				

33. Consider the reaction:



The tabulated data were collected for the concentration of C_4H_8 as a function of time.

Time (s)	C_4H_8 (M)
0	1.000
10	0.913
20	0.835
30	0.763
40	0.697
50	0.637

- a. What is the average rate of the reaction between 0 and 10 s? Between 40 and 50 s?
- b. What is the rate of formation of C_2H_4 between 20 and 30 s?

34. Consider the reaction.

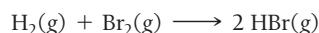


The tabulated data were collected for the concentration of NO_2 as a function of time.

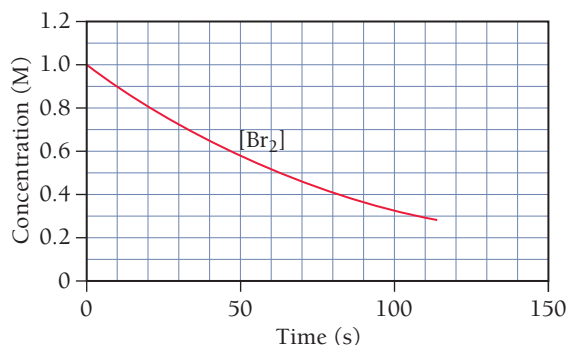
Time (s)	$[\text{NO}_2]$ (M)
0	1.000
10	0.951
20	0.904
30	0.860
40	0.818
50	0.778
60	0.740
70	0.704
80	0.670
90	0.637
100	0.606

- a. What is the average rate of the reaction between 10 and 20 s? Between 50 and 60 s?
- b. What is the rate of formation of O_2 between 50 and 60 s?

35. Consider the reaction.

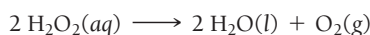


The graph shows the concentration of Br_2 as a function of time.

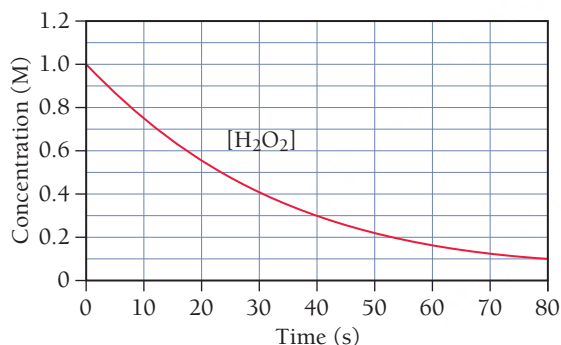


- Use the graph to calculate each quantity.
 - the average rate of the reaction between 0 and 25 s
 - the instantaneous rate of the reaction at 25 s
 - the instantaneous rate of formation of HBr at 50 s
- Make a rough sketch of a curve representing the concentration of HBr as a function of time. Assume that the initial concentration of HBr is zero.

36. Consider the reaction.



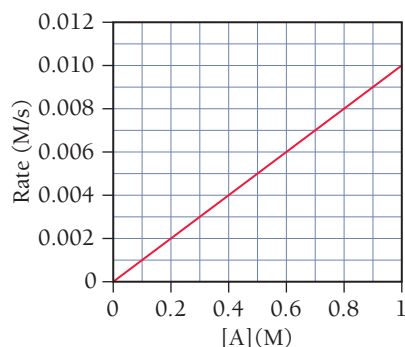
The graph shows the concentration of H_2O_2 as a function of time.



- Use the graph to calculate each quantity.
 - the average rate of the reaction between 10 and 20 s
 - the instantaneous rate of the reaction at 30 s
 - the instantaneous rate of formation of O_2 at 50 s
- If the initial volume of the H_2O_2 is 1.5 L, what total amount of O_2 (in moles) is formed in the first 50 s of reaction?

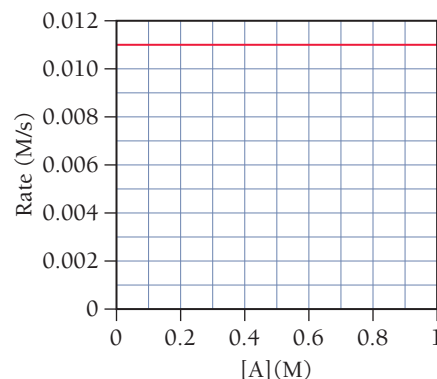
The Rate Law and Reaction Orders

37. This graph shows a plot of the rate of a reaction versus the concentration of the reactant A for the reaction
- $\text{A} \longrightarrow \text{products}$
- .



- What is the order of the reaction with respect to A?
- Make a rough sketch of a plot of [A] versus time.
- Write a rate law for the reaction including an estimate for the value of k .

38. This graph shows a plot of the rate of a reaction versus the concentration of the reactant.



- What is the order of the reaction with respect to A?
- Make a rough sketch of a plot of [A] versus time.
- Write a rate law for the reaction including the value of k .

39. What are the units of
- k
- for each type of reaction?

- first-order reaction
- second-order reaction
- zero-order reaction

40. This reaction is first order in
- N_2O_5
- :



The rate constant for the reaction at a certain temperature is 0.053/s.

- Calculate the rate of the reaction when $[\text{N}_2\text{O}_5] = 0.055 \text{ M}$.
- What is the rate of the reaction at the concentration indicated in part a if the reaction is second order? Zero order? (Assume the same numerical value for the rate constant with the appropriate units.)

41. A reaction in which A, B, and C react to form products is first order in A, second order in B, and zero order in C.

- Write a rate law for the reaction.
- What is the overall order of the reaction?
- By what factor does the reaction rate change if [A] is doubled (and the other reactant concentrations are held constant)?
- By what factor does the reaction rate change if [B] is doubled (and the other reactant concentrations are held constant)?
- By what factor does the reaction rate change if [C] is doubled (and the other reactant concentrations are held constant)?
- By what factor does the reaction rate change if the concentrations of all three reactants are doubled?

42. A reaction in which A, B, and C react to form products is zero order in A, one-half order in B, and second order in C.

- Write a rate law for the reaction.
- What is the overall order of the reaction?
- By what factor does the reaction rate change if [A] is doubled (and the other reactant concentrations are held constant)?
- By what factor does the reaction rate change if [B] is doubled (and the other reactant concentrations are held constant)?
- By what factor does the reaction rate change if [C] is doubled (and the other reactant concentrations are held constant)?
- By what factor does the reaction rate change if the concentrations of all three reactants are doubled?

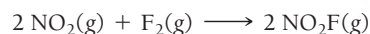
43. Consider the tabulated data showing the initial rate of a reaction ($A \longrightarrow \text{products}$) at several different concentrations of A. What is the order of the reaction? Write a rate law for the reaction including the value of the rate constant, k .

[A] (M)	Initial Rate (M/s)
0.100	0.053
0.200	0.210
0.300	0.473

44. Consider the tabulated data showing the initial rate of a reaction ($A \longrightarrow \text{products}$) at several different concentrations of A. What is the order of the reaction? Write a rate law for the reaction including the value of the rate constant, k .

[A] (M)	Initial Rate (M/s)
0.15	0.008
0.30	0.016
0.60	0.032

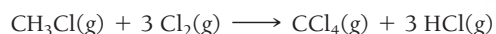
45. The tabulated data were collected for this reaction:



[NO ₂] (M)	[F ₂] (M)	Initial Rate (M/s)
0.100	0.100	0.026
0.200	0.100	0.051
0.200	0.200	0.103
0.400	0.400	0.411

Write an expression for the reaction rate law and calculate the value of the rate constant, k . What is the overall order of the reaction?

46. The tabulated data were collected for this reaction:



[CH ₃ Cl] (M)	[Cl ₂] (M)	Initial Rate (M/s)
0.050	0.050	0.014
0.100	0.050	0.029
0.100	0.100	0.041
0.200	0.200	0.115

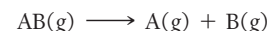
Write an expression for the reaction rate law and calculate the value of the rate constant, k . What is the overall order of the reaction?

The Integrated Rate Law and Half-Life

47. Indicate the order of reaction consistent with each observation.
- A plot of the concentration of the reactant versus time yields a straight line.
 - The reaction has a half-life that is independent of initial concentration.

c. A plot of the inverse of the concentration versus time yields a straight line.

48. Indicate the order of reaction consistent with each observation.
- The half-life of the reaction gets shorter as the initial concentration is increased.
 - A plot of the natural log of the concentration of the reactant versus time yields a straight line.
 - The half-life of the reaction gets longer as the initial concentration is increased.
49. The tabulated data show the concentration of AB versus time for this reaction:



Time (s)	[AB] (M)
0	0.950
50	0.459
100	0.302
150	0.225
200	0.180
250	0.149
300	0.128
350	0.112
400	0.0994
450	0.0894
500	0.0812

Determine the order of the reaction and the value of the rate constant. Predict the concentration of AB at 25 s.

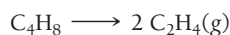
50. The tabulated data show the concentration of N₂O₅ versus time for this reaction:



Time (s)	[N ₂ O ₅] (M)
0	1.000
25	0.822
50	0.677
75	0.557
100	0.458
125	0.377
150	0.310
175	0.255
200	0.210

Determine the order of the reaction and the value of the rate constant. Predict the concentration of N₂O₅ at 250 s.

51. The tabulated data show the concentration of cyclobutane (C_4H_8) versus time for this reaction:



Time (s)	$[\text{C}_4\text{H}_8]$ (M)
0	1.000
10	0.894
20	0.799
30	0.714
40	0.638
50	0.571
60	0.510
70	0.456
80	0.408
90	0.364
100	0.326

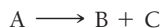
Determine the order of the reaction and the value of the rate constant. What is the rate of reaction when $[\text{C}_4\text{H}_8] = 0.25 \text{ M}$?

52. A reaction in which $\text{A} \longrightarrow \text{products}$ is monitored as a function of time. The results are tabulated here.

Time (s)	$[\text{A}]$ (M)
0	1.000
25	0.914
50	0.829
75	0.744
100	0.659
125	0.573
150	0.488
175	0.403
200	0.318

Determine the order of the reaction and the value of the rate constant. What is the rate of reaction when $[\text{A}] = 0.10 \text{ M}$?

53. This reaction was monitored as a function of time:



A plot of $\ln[\text{A}]$ versus time yields a straight line with slope $-0.0045/\text{s}$.

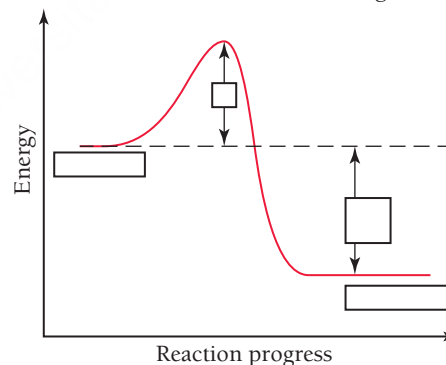
- What is the value of the rate constant (k) for this reaction at this temperature?
 - Write the rate law for the reaction.
 - What is the half-life?
 - If the initial concentration of A is 0.250 M , what is the concentration after 225 s ?
54. This reaction was monitored as a function of time:
- $$\text{AB} \longrightarrow \text{A} + \text{B}$$
- A plot of $1/[\text{AB}]$ versus time yields a straight line with slope $-0.055/\text{M} \cdot \text{s}$.
- What is the value of the rate constant (k) for this reaction at this temperature?
 - Write the rate law for the reaction.
 - What is the half-life when the initial concentration is 0.55 M ?
 - If the initial concentration of AB is 0.250 M , and the reaction mixture initially contains no products, what are the concentrations of A and B after 75 s ?
55. The decomposition of SO_2Cl_2 is first order in SO_2Cl_2 and has a rate constant of $1.42 \times 10^{-4} \text{ s}^{-1}$ at a certain temperature.
- What is the half-life for this reaction?
 - How long will it take for the concentration of SO_2Cl_2 to decrease to 25% of its initial concentration?

- If the initial concentration of SO_2Cl_2 is 1.00 M , how long will it take for the concentration to decrease to 0.78 M ?
- If the initial concentration of SO_2Cl_2 is 0.150 M , what is the concentration of SO_2Cl_2 after $2.00 \times 10^2 \text{ s}$? After $5.00 \times 10^2 \text{ s}$?

56. The decomposition of XY is second order in XY and has a rate constant of $7.02 \times 10^{-3} \text{ M}^{-1} \cdot \text{s}^{-1}$ at a certain temperature.
- What is the half-life for this reaction at an initial concentration of 0.100 M ?
 - How long will it take for the concentration of XY to decrease to 12.5% of its initial concentration when the initial concentration is 0.100 M ? When the initial concentration is 0.200 M ?
 - If the initial concentration of XY is 0.150 M , how long will it take for the concentration to decrease to 0.062 M ?
 - If the initial concentration of XY is 0.050 M , what is the concentration of XY after $5.0 \times 10^1 \text{ s}$? After $5.50 \times 10^2 \text{ s}$?
57. The half-life for the radioactive decay of U-238 is 4.5 billion years and is independent of initial concentration. How long will it take for 10% of the U-238 atoms in a sample of U-238 to decay? If a sample of U-238 initially contained 1.5×10^{18} atoms when the universe was formed 13.8 billion years ago, how many U-238 atoms does it contain today?
58. The half-life for the radioactive decay of C-14 is 5730 years and is independent of the initial concentration. How long does it take for 25% of the C-14 atoms in a sample of C-14 to decay? If a sample of C-14 initially contains 1.5 mmol of C-14, how many millimoles are left after 2255 years?

The Effect of Temperature and the Collision Model

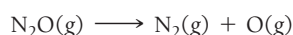
59. The diagram shows the energy of a reaction as the reaction progresses. Label each blank box in the diagram.



- reactants
 - products
 - activation energy (E_a)
 - enthalpy of reaction (ΔH_{rxn})
60. A chemical reaction is endothermic and has an activation energy that is twice the value of the enthalpy change of the reaction. Draw a diagram depicting the energy of the reaction as it progresses. Label the position of the reactants and products and indicate the activation energy and enthalpy of reaction.
61. The activation energy of a reaction is 56.8 kJ/mol and the frequency factor is $1.5 \times 10^{11}/\text{s}$. Calculate the rate constant of the reaction at 25°C .
62. The rate constant of a reaction at 32°C is $0.055/\text{s}$. If the frequency factor is $1.2 \times 10^{13}/\text{s}$, what is the activation barrier?
63. The rate constant (k) for a reaction is measured as a function of temperature. A plot of $\ln k$ versus $1/T$ (in K) is linear and has a slope of -7445 K . Calculate the activation energy for the reaction.
64. The rate constant (k) for a reaction is measured as a function of temperature. A plot of $\ln k$ versus $1/T$ (in K) is linear and has a

slope of -1.01×10^4 K. Calculate the activation energy for the reaction.

65. The tabulated data shown here were collected for the first-order reaction:




Use an Arrhenius plot to determine the activation barrier and frequency factor for the reaction.

Temperature (K)	Rate Constant (s^{-1})
800	3.24×10^{-5}
900	0.00214
1000	0.0614
1100	0.955

66. The tabulated data show the rate constant of a reaction measured at several different temperatures. Use an Arrhenius plot to determine the activation barrier and frequency factor for the reaction.

Temperature (K)	Rate Constant (s^{-1})
300	0.0134
310	0.0407
320	0.114
330	0.303
340	0.757

67. The tabulated data were collected for the second-order reaction:



Use an Arrhenius plot to determine the activation barrier and frequency factor for the reaction.

Temperature (K)	Rate Constant ($\text{L/mol} \cdot \text{s}$)
90	0.00357
100	0.0773
110	0.956
120	7.781

68. The tabulated data show the rate constant of a reaction measured at several different temperatures. Use an Arrhenius plot to determine the activation barrier and frequency factor for the reaction.

Temperature (K)	Rate Constant (s^{-1})
310	0.00434
320	0.0140
330	0.0421
340	0.118
350	0.316

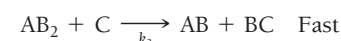
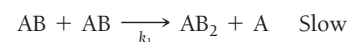
69. A reaction has a rate constant of $0.0117/\text{s}$ at 400.0 K and $0.689/\text{s}$ at 450.0 K.
 a. Determine the activation barrier for the reaction.
 b. What is the value of the rate constant at 425 K?
70. A reaction has a rate constant of $0.000122/\text{s}$ at 27°C and $0.228/\text{s}$ at 77°C .
 a. Determine the activation barrier for the reaction.
 b. What is the value of the rate constant at 17°C ?
71. If a temperature increase from 10.0°C to 20.0°C doubles the rate constant for a reaction, what is the value of the activation barrier for the reaction?
72. If a temperature increase from 20.0°C to 35.0°C triples the rate constant for a reaction, what is the value of the activation barrier for the reaction?
73. Consider these two gas-phase reactions:
 a. $\text{AA}(\text{g}) + \text{BB}(\text{g}) \longrightarrow 2 \text{AB}(\text{g})$
 b. $\text{AB}(\text{g}) + \text{CD}(\text{g}) \longrightarrow \text{AC}(\text{g}) + \text{BD}(\text{g})$
 If the reactions have identical activation barriers and are carried out under the same conditions, which one would you expect to have the faster rate?
74. Which of these two reactions would you expect to have the smaller orientation factor? Explain.
 a. $\text{O}(\text{g}) + \text{N}_2(\text{g}) \longrightarrow \text{NO}(\text{g}) + \text{N}(\text{g})$
 b. $\text{NO}(\text{g}) + \text{Cl}_2(\text{g}) \longrightarrow \text{NOCl}(\text{g}) + \text{Cl}(\text{g})$

Reaction Mechanisms

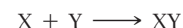
75. Consider this overall reaction, which is experimentally observed to be second order in AB and zero order in C:



Is the following mechanism valid for this reaction?

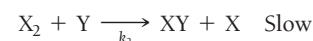
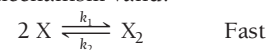


76. Consider this overall reaction, which is experimentally observed to be second order in X and first order in Y:

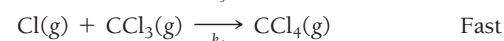
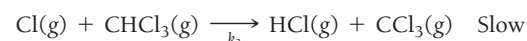
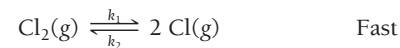


- a. Does the reaction occur in a single step in which X and Y collide?

- b. Is this two-step mechanism valid?

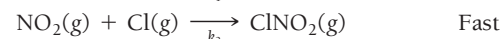
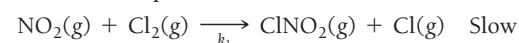


77. Consider this three-step mechanism for a reaction:



- a. What is the overall reaction?
 b. Identify the intermediates in the mechanism.
 c. What is the predicted rate law?

78. Consider this two-step mechanism for a reaction:



- a. What is the overall reaction?
 b. Identify the intermediates in the mechanism.
 c. What is the predicted rate law?

Catalysis

79. Many heterogeneous catalysts are deposited on high surface-area supports. Why?
80. Suppose that the reaction $A \longrightarrow \text{products}$ is exothermic and has an activation barrier of 75 kJ/mol. Sketch an energy diagram showing the energy of the reaction as a function of the progress of the reaction. Draw a second energy curve showing the effect of a catalyst.
81. Suppose that a catalyst lowers the activation barrier of a reaction from 125 kJ/mol to 55 kJ/mol. By what factor would you

expect the reaction rate to increase at 25°C? (Assume that the frequency factors for the catalyzed and uncatalyzed reactions are identical.)

82. The activation barrier for the hydrolysis of sucrose into glucose and fructose is 108 kJ/mol. If an enzyme increases the rate of the hydrolysis reaction by a factor of 1 million, how much lower must the activation barrier be when sucrose is in the active site of the enzyme? (Assume that the frequency factors for the catalyzed and uncatalyzed reactions are identical and a temperature of 25°C.)


CUMULATIVE PROBLEMS

83. The tabulated data were collected for this reaction at 500°C:



Time (h)	[CH ₃ CN] (M)
0.0	1.000
5.0	0.794
10.0	0.631
15.0	0.501
20.0	0.398
25.0	0.316

- Determine the order of the reaction and the value of the rate constant at this temperature.
 - What is the half-life for this reaction (at the initial concentration)?
 - How long will it take for 90% of the CH₃CN to convert to CH₃NC?
84. The tabulated data were collected for this reaction at a certain temperature:



Time (h)	[X ₂ Y] (M)
0.0	0.100
1.0	0.0856
2.0	0.0748
3.0	0.0664
4.0	0.0598
5.0	0.0543

- Determine the order of the reaction and the value of the rate constant at this temperature.
 - What is the half-life for this reaction (at the initial concentration)?
 - What is the concentration of X after 10.0 hours?
85. Consider the reaction:




The rate law for this reaction is:

$$\text{rate} = k \frac{[\text{A}][\text{C}]^2}{[\text{B}]^{1/2}}$$

Suppose the rate of the reaction at certain initial concentrations of A, B, and C is 0.0115 M/s. What is the rate of the reaction if the concentrations of A and C are doubled and the concentration of B is tripled?

86. Consider the reaction:




The rate law for this reaction is:

$$\text{rate} = k \frac{[\text{O}_3]^2}{[\text{O}_2]}$$

Suppose that a 1.0 L reaction vessel initially contains 1.0 mol of O₃ and 1.0 mol of O₂. What fraction of the O₃ has reacted when the rate falls to one-half of its initial value?

87. At 700 K acetaldehyde decomposes in the gas phase to methane and carbon monoxide. The reaction is:



A sample of CH₃CHO is heated to 700 K, and the pressure is measured as 0.22 atm before any reaction takes place. The kinetics of the reaction are followed by measurements of total pressure, and these data are obtained:

t(s)	0	1000	3000	7000
P _{Total} (atm)	0.22	0.24	0.27	0.31

Determine the rate law, the rate constant, and the total pressure after 2.00×10^4 s.

88. At 400 K oxalic acid decomposes according to the reaction:



In three separate experiments, the initial pressure of oxalic acid and the final total pressure after 20,000 s are measured.

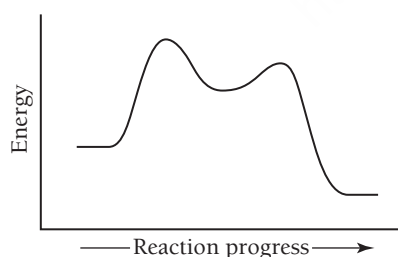
Experiment	1	2	3
P _{H₂C₂O₄} at t = 0	65.8	92.1	111
P _{Total} at t = 20,000 s	94.6	132	160

Find the rate law of the reaction and its specific rate constant.

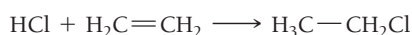
89. Dinitrogen pentoxide decomposes in the gas phase to form nitrogen dioxide and oxygen gas. The reaction is first order in dinitrogen pentoxide and has a half-life of 2.81 h at 25°C. If a 1.5 L reaction vessel initially contains 745 torr of N₂O₅ at 25°C, what partial pressure of O₂ is present in the vessel after 215 minutes?

90. Cyclopropane (C_3H_6) reacts to form propene (C_3H_6) in the gas phase. The reaction is first order in cyclopropane and has a rate constant of $5.87 \times 10^{-4}/\text{s}$ at 485°C . If a 2.5 L reaction vessel initially contains 722 torr of cyclopropane at 485°C , how long will it take for the partial pressure of cyclopropane to drop to below 1.00×10^2 torr?
91. Iodine atoms combine to form I_2 in liquid hexane solvent with a rate constant of $1.5 \times 10^{10} \text{ L/mol} \cdot \text{s}$. The reaction is second order in I. Since the reaction occurs so quickly, the only way to study the reaction is to create iodine atoms almost instantaneously, usually by photochemical decomposition of I_2 . Suppose a flash of light creates an initial $[\text{I}]$ concentration of 0.0100 M. How long will it take for 95% of the newly created iodine atoms to recombine to form I_2 ?
92. The hydrolysis of sucrose ($\text{C}_{12}\text{H}_{22}\text{O}_{11}$) into glucose and fructose in acidic water has a rate constant of $1.8 \times 10^{-4} \text{ s}^{-1}$ at 25°C . Assuming the reaction is first order in sucrose, determine the mass of sucrose that is hydrolyzed when 2.55 L of a 0.150 M sucrose solution is allowed to react for 195 minutes.
93. The reaction $\text{AB}(\text{aq}) \longrightarrow \text{A}(\text{g}) + \text{B}(\text{g})$ is second order in AB and has a rate constant of $0.0118 \text{ M}^{-1} \cdot \text{s}^{-1}$ at 25.0°C . A reaction vessel initially contains 250.0 mL of 0.100 M AB that is allowed to react to form the gaseous product. The product is collected over water at 25.0°C . How much time is required to produce 200.0 mL of the products at a barometric pressure of 755.1 mmHg? (The vapor pressure of water at this temperature is 23.8 mmHg.)
94. The reaction $2 \text{H}_2\text{O}_2(\text{aq}) \longrightarrow 2 \text{H}_2\text{O}(\text{l}) + \text{O}_2(\text{g})$ is first order in H_2O_2 and under certain conditions has a rate constant of 0.00752 s^{-1} at 20.0°C . A reaction vessel initially contains 150.0 mL of 30.0% H_2O_2 by mass solution (the density of the solution is 1.11 g/mL). The gaseous oxygen is collected over water at 20.0°C as it forms. What volume of O_2 forms in 85.0 seconds at a barometric pressure of 742.5 mmHg? (The vapor pressure of water at this temperature is 17.5 mmHg.)

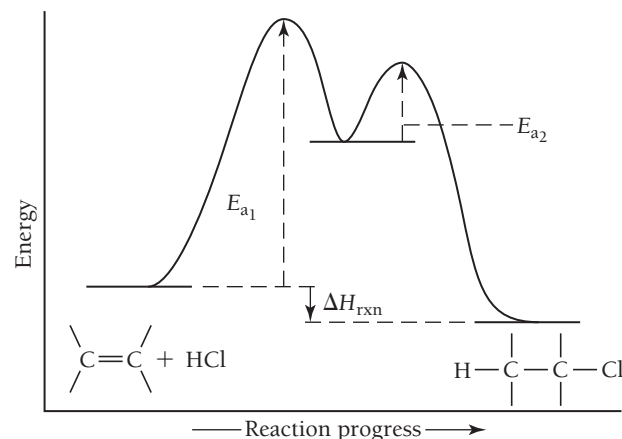
95. Consider this energy diagram:




- How many elementary steps are involved in this reaction?
 - Label the reactants, products, and intermediates.
 - Which step is rate limiting?
 - Is the overall reaction endothermic or exothermic?
96. Consider the reaction in which HCl adds across the double bond of ethene:



The following mechanism, with the accompanying energy diagram, has been suggested for this reaction:



- Based on the energy diagram, determine which step is rate limiting.
 - What is the expected order of the reaction based on the proposed mechanism?
 - Is the overall reaction exothermic or endothermic?
97. The desorption of a single molecular layer of *n*-butane from a single crystal of aluminum oxide is found to be first order with a rate constant of 0.128/s at 150 K.
- What is the half-life of the desorption reaction?
 - If the surface is initially completely covered with *n*-butane at 150 K, how long will it take for 25% of the molecules to desorb? For 50% to desorb?
 - If the surface is initially completely covered, what fraction will remain covered after 10 s? After 20 s?
98. The evaporation of a 120-nm film of *n*-pentane from a single crystal of aluminum oxide is zero order with a rate constant of $1.92 \times 10^{13} \text{ molecules/cm}^2 \cdot \text{s}$ at 120 K.
- If the initial surface coverage is $8.9 \times 10^{16} \text{ molecules/cm}^2$, how long will it take for one-half of the film to evaporate?
 - What fraction of the film is left after 10 s? Assume the same initial coverage as in part a.
99. The kinetics of this reaction were studied as a function of temperature. (The reaction is first order in each reactant and second order overall.)

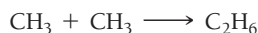


Temperature ($^\circ\text{C}$)	$k(\text{L/mol} \cdot \text{s})$
25	8.81×10^{-5}
35	0.000285
45	0.000854
55	0.00239
65	0.00633

- Determine the activation energy and frequency factor for the reaction.
- Determine the rate constant at 15°C .
- If a reaction mixture is 0.155 M in $\text{C}_2\text{H}_5\text{Br}$ and 0.250 M in OH^- , what is the initial rate of the reaction at 75°C ?

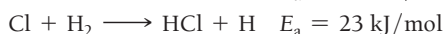
100. The reaction $2 \text{N}_2\text{O}_5 \longrightarrow 2 \text{N}_2\text{O}_4 + \text{O}_2$ takes place at around room temperature in solvents such as CCl_4 . The rate constant at 293 K is $2.35 \times 10^{-4} \text{ s}^{-1}$, and at 303 K the rate constant is $9.15 \times 10^{-4} \text{ s}^{-1}$. Calculate the frequency factor for the reaction.

101. This reaction has an activation energy of zero in the gas phase:



- Would you expect the rate of this reaction to change very much with temperature?
- Why might the activation energy be zero?
- What other types of reactions would you expect to have little or no activation energy?

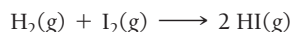
102. Consider the two reactions:



- Why is the activation barrier for the first reaction so much higher than that for the second?
 - The frequency factors for these two reactions are very close to each other in value. Assuming that they are the same, calculate the ratio of the reaction rate constants for these two reactions at 25°C .
103. Anthropologists can estimate the age of a bone or other sample of organic matter by its carbon-14 content. The carbon-14 in a living organism is constant until the organism dies, after which carbon-14 decays with first-order kinetics and a half-life of 5730 years. Suppose a bone from an ancient human contains 19.5% of the C-14 found in living organisms. How old is the bone?

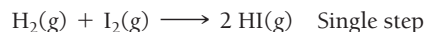
104. Geologists can estimate the age of rocks by their uranium-238 content. The uranium is incorporated in the rock as it hardens and then decays with first-order kinetics and a half-life of 4.5 billion years. A rock contains 83.2% of the amount of uranium-238 that it contained when it was formed. (The amount that the rock contained when it was formed can be deduced from the presence of the decay products of U-238.) How old is the rock?

105. Consider the gas-phase reaction:

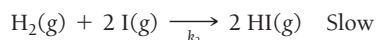
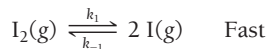


The reaction was experimentally determined to be first order in H_2 and first order in I_2 . Consider the proposed mechanisms.

Proposed mechanism I:



Proposed mechanism II:

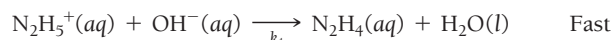
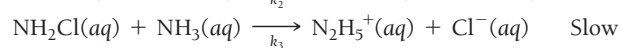


- Show that both of the proposed mechanisms are valid.
- What kind of experimental evidence might lead you to favor mechanism II over mechanism I?

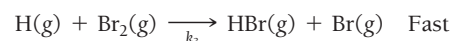
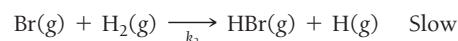
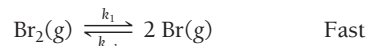
106. Consider the reaction:



This three-step mechanism is proposed:

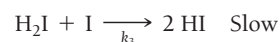
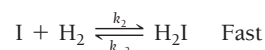
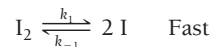


- Show that the mechanism sums to the overall reaction.
 - What is the rate law predicted by this mechanism?
107. The proposed mechanism for the formation of hydrogen bromide can be written in a simplified form as:




What rate law corresponds to this mechanism?

108. A proposed mechanism for the formation of hydrogen iodide can be written in simplified form as:



What rate law corresponds to this mechanism?

109. A certain substance X decomposes. Fifty percent of X remains after 100 minutes. How much X remains after 200 minutes if the reaction order with respect to X is (a) zero order, (b) first order, (c) second order?
110. The half-life for radioactive decay (a first-order process) of plutonium-239 is 24,000 years. How many years does it take for one mole of this radioactive material to decay until just one atom remains?
111. The energy of activation for the decomposition of 2 mol of HI to H_2 and I_2 in the gas phase is 185 kJ. The heat of formation of $\text{HI}(\text{g})$ from $\text{H}_2(\text{g})$ and $\text{I}_2(\text{g})$ is -5.68 kJ/mol . Find the energy of activation for the reaction of 1 mol of H_2 and 1 mol of I_2 to form 2 mol of HI in the gas phase.
112. Ethyl chloride vapor decomposes by the first-order reaction:



The activation energy is 249 kJ/mol, and the frequency factor is $1.6 \times 10^{14} \text{ s}^{-1}$. Find the value of the specific rate constant at 710 K. What fraction of the ethyl chloride decomposes in 15 minutes at this temperature? Find the temperature at which the rate of the reaction would be twice as fast.

CHALLENGE PROBLEMS

113. In this chapter we have seen a number of reactions in which a single reactant forms products. For example, consider the following first-order reaction:



However, we also learned that gas-phase reactions occur through collisions.

- One possible explanation is that two molecules of CH_3NC collide with each other and form two molecules of the product in a single elementary step. If that is the case, what reaction order would you expect?
- Another possibility is that the reaction occurs through more than one step. For example, a possible mechanism involves one step in which the two CH_3NC molecules collide, resulting

in the “activation” of one of them. In a second step, the activated molecule goes on to form the product. Write down this mechanism and determine which step must be rate determining in order for the kinetics of the reaction to be first order. Show explicitly how the mechanism predicts first-order kinetics.

114. The first-order *integrated* rate law for a reaction $A \longrightarrow$ products is derived from the rate law using calculus:

$$\text{rate} = k[A] \quad (\text{first-order rate law})$$

$$\text{rate} = \frac{d[A]}{dt}$$

$$\frac{d[A]}{dt} = -k[A]$$

The equation just given is a first-order, separable differential equation that can be solved by separating the variables and integrating:

$$\frac{d[A]}{[A]} = -kdt$$

$$\int_{[A]_0}^{[A]} \frac{d[A]}{[A]} = -\int_0^t kdt$$

In the integral just given, $[A]_0$ is the initial concentration of A. We then evaluate the integral:

$$[\ln [A]]_{[A]_0}^{[A]} = -k[t]_0^t$$

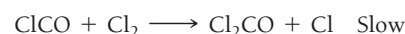
$$\ln [A] - \ln [A]_0 = -kt$$

$$\ln [A] = -kt + \ln [A]_0 \quad (\text{integrated rate law})$$

- Use a procedure similar to the one just shown to derive an integrated rate law for a reaction $A \longrightarrow$ products, which is one-half-order in the concentration of A (that is, $\text{Rate} = k[A]^{1/2}$).
 - Use the result from part a to derive an expression for the half-life of a one-half-order reaction.
115. The previous exercise shows how the first-order integrated rate law is derived from the first-order differential rate law. Begin

with the second-order differential rate law and derive the second-order integrated rate law.

116. The rate constant for the first-order decomposition of $\text{N}_2\text{O}_5(\text{g})$ to $\text{NO}_2(\text{g})$ and $\text{O}_2(\text{g})$ is $7.48 \times 10^{-3} \text{ s}^{-1}$ at a given temperature.
- Find the length of time required for the total pressure in a system containing N_2O_5 at an initial pressure of 0.100 atm to rise to 0.145 atm.
 - Find the length of time required for the total pressure in a system containing N_2O_5 at an initial pressure of 0.100 atm to rise to 0.200 atm.
 - Find the total pressure after 100 s of reaction.
117. Phosgene (Cl_2CO), a poison gas used in World War I, is formed by the reaction of Cl_2 and CO. The proposed mechanism for the reaction is:



What rate law is consistent with this mechanism?

118. The rate of decomposition of $\text{N}_2\text{O}_3(\text{g})$ to $\text{NO}_2(\text{g})$ and $\text{NO}(\text{g})$ is monitored by measuring $[\text{NO}_2]$ at different times. The following tabulated data are obtained.

$[\text{NO}_2](\text{mol/L})$	0	0.193	0.316	0.427	0.784
$t(\text{s})$	0	884	1610	2460	50,000

The reaction follows a first-order rate law. Calculate the rate constant. Assume that after 50,000 s all the $\text{N}_2\text{O}_3(\text{g})$ had decomposed.

119. At 473 K, for the elementary reaction $2 \text{NOCl}(\text{g}) \xrightleftharpoons[k_{-1}]{k_1} 2 \text{NO}(\text{g}) + \text{Cl}_2(\text{g})$

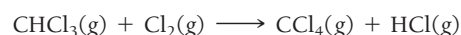
$$k_1 = 7.8 \times 10^{-2} \text{ L/mol s and}$$

$$k_{-1} = 4.7 \times 10^2 \text{ L}^2/\text{mol}^2 \text{ s}$$

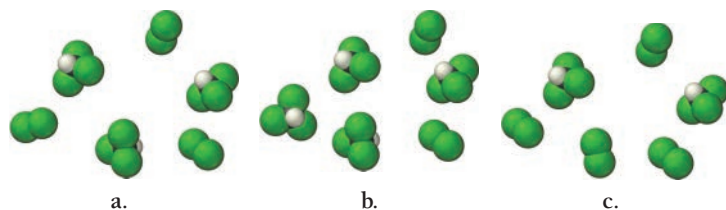
A sample of NOCl is placed in a container and heated to 473 K. When the system comes to equilibrium, $[\text{NOCl}]$ is found to be 0.12 mol/L. What are the concentrations of NO and Cl_2 ?

CONCEPTUAL PROBLEMS

120. Consider the reaction:

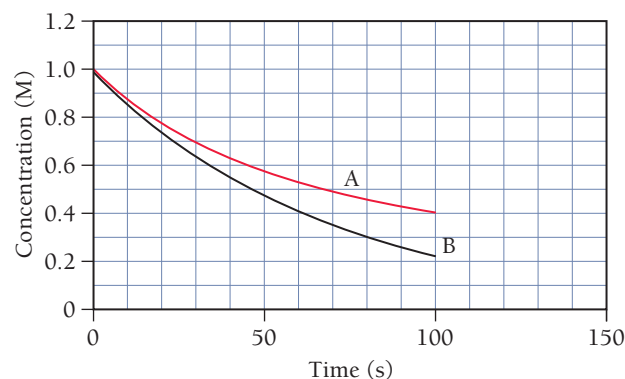


The reaction is first order in CHCl_3 and one-half order in Cl_2 . Which reaction mixture would you expect to have the fastest initial rate?



121. The accompanying graph shows the concentration of a reactant as a function of time for two different reactions. One of the reactions is first order and the other is second order. Which of the two

reactions is first order? Second order? How would you change each plot to make it linear?



122. A particular reaction, $A \longrightarrow \text{products}$, has a rate that slows down as the reaction proceeds. The half-life of the reaction is found to depend on the initial concentration of A. Determine whether each statement is likely to be true or false for this reaction.
- A doubling of the concentration of A doubles the rate of the reaction.
 - A plot of $1/[A]$ versus time is linear.

- The half-life of the reaction gets longer as the initial concentration of A increases.
- A plot of the concentration of A versus time has a constant slope.

QUESTIONS FOR GROUP WORK

Discuss these questions with the group and record your consensus answer.

123. A student says, “The initial concentration of a reactant was doubled, and the rate doubled. Therefore, the reaction is second order in that reactant.” Why might the student say that? What is wrong with the statement? What is the actual order with respect to the reactant? Explain your reasoning clearly.
124. A certain compound, A, reacts to form products according to the reaction $A \longrightarrow P$. The amount of A is measured as a function of time under a variety of different conditions and the tabulated results are shown here:

Time (s)	25.0°C [A] (M)	35.0°C [A] (M)	45.0°C [A] (M)
0	1.000	1.000	1.000
10	0.779	0.662	0.561
20	0.591	0.461	0.312
30	0.453	0.306	0.177
40	0.338	0.208	0.100
50	0.259	0.136	0.057
60	0.200	0.093	0.032

Have one group member make a graph of [A] versus t , one group member make a graph of $\ln[A]$ versus t , and one group member

Active Classroom Learning

make a graph of $1/[A]$ versus t using the data for 25°C. Additional group members can make similar graphs for the other temperatures. What is the order of the reaction with respect to A? Explain your answer.

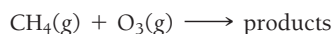
- Use the data to determine the rate constant at each temperature.
- What is the activation energy for this reaction?
- The same reaction is conducted in the presence of a catalyst, and the following data are obtained:

Time (s)	25.0°C [A] (M)	35.0°C [A] (M)	45.0°C [A] (M)
0	1.000	1.000	1.000
0.1	0.724	0.668	0.598
0.2	0.511	0.433	0.341
0.3	0.375	0.291	0.202
0.4	0.275	0.190	0.119
0.5	0.198	0.122	0.071
0.6	0.141	0.080	0.043

What effect does a catalyst have on the rate of the reaction? What is the activation energy for this reaction in the presence of the catalyst? How does it compare with the activation energy for the reaction when the catalyst isn't present?

DATA INTERPRETATION AND ANALYSIS

125. Methane (CH_4) is a greenhouse gas emitted by industry, agriculture, and waste systems. It is the second most prevalent greenhouse gas (after carbon dioxide). Methane plays an important role in climate change because it absorbs infrared radiation more efficiently than carbon dioxide. Methane is broken down in the atmosphere by ozone (O_3), making its atmospheric lifetime shorter than that of carbon dioxide.



A research group studied the rate of the reaction by which methane reacts with ozone and gets the data shown in the tables shown here. Study the data and answer the questions that follow.

Initial Rate versus Initial Concentrations

[CH ₄]	[O ₃]	Initial Rate (M/s)
0.010	0.010	3.94×10^{-7}
0.020	0.010	7.88×10^{-7}
0.020	0.020	1.58×10^{-6}

Rate Constant versus Temperature

Temperature (K)	$k(\text{M}^{-1} \cdot \text{s}^{-1})$
260	2.26×10^{-5}
265	3.65×10^{-5}
270	6.76×10^{-5}
275	0.000114
280	0.000187
285	0.000303
290	0.000483
295	0.000758
300	0.001171
305	0.001783

- Use the data in the first table to determine the order of the reaction with respect to each reactant.
- Use the data in the second table to determine the activation barrier and pre-exponential factor for the reaction.
- Atmospheric concentrations of methane and ozone can vary depending on the location and altitude. Calculate the rate of the reaction at 273 K for a methane concentration of 1.8 ppm (by volume) and an ozone concentration of 5.0 ppm (by volume). Note that 1 ppm of CH_4 by volume means 1 L $\text{CH}_4/10^6$ L air. Assume STP (standard temperature and pressure) so that 1 mol gas occupies 22.4 L.
- What is the half-life of methane in the atmosphere in years at 323 K? (Assume that $[\text{CH}_4] = [\text{O}_3] = [\text{A}]_0 = 5.0 \times 10^{-7} \text{ M}$.)

ANSWERS TO CONCEPTUAL CONNECTIONS

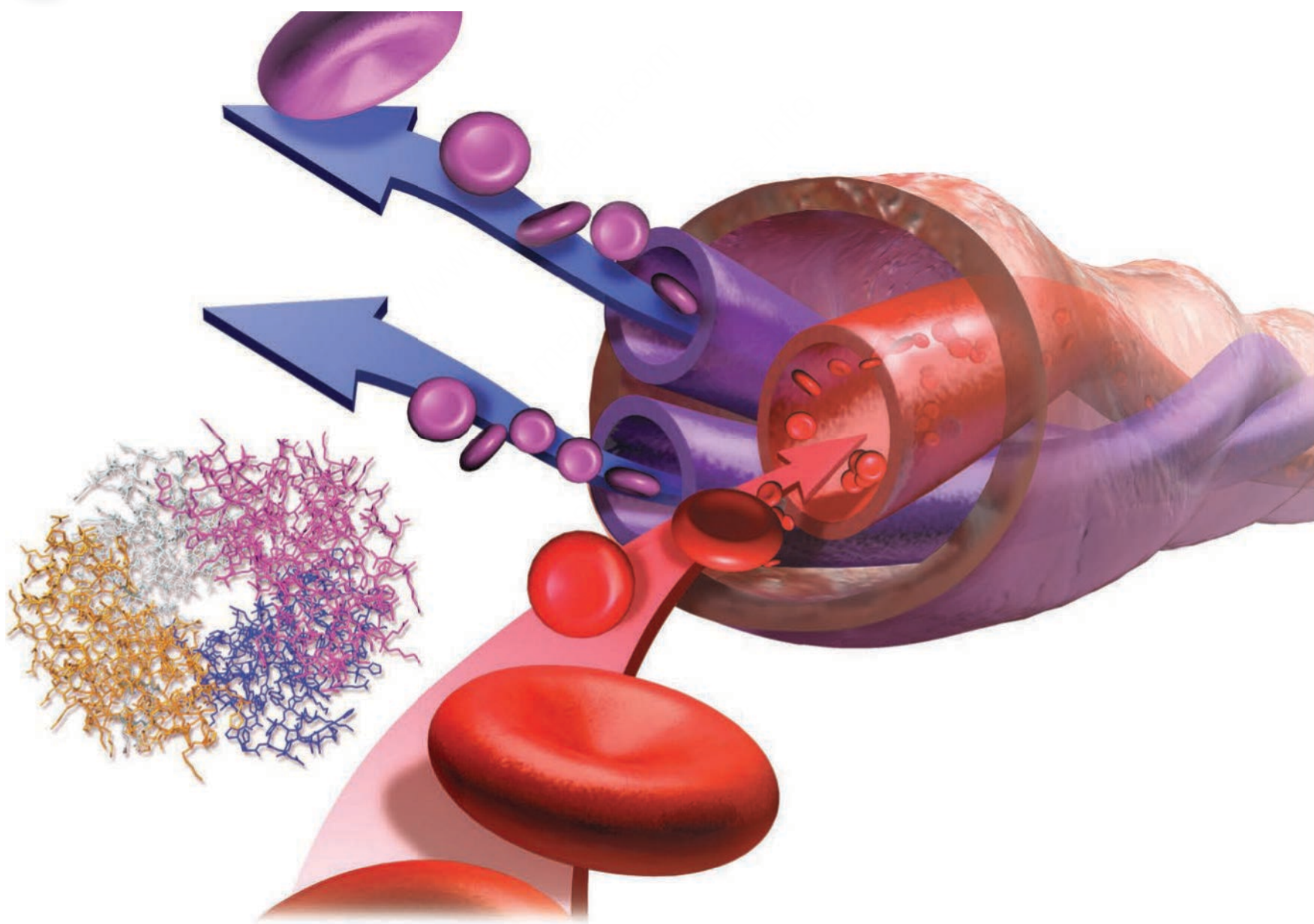
- Cc 14.1 (b) Increasing the temperature increases the number of collisions that can occur with enough energy for the reaction to occur.
- Cc 14.2 (c) The rate at which B changes is twice the rate of the reaction because its coefficient is 2, and it is negative because B is a reactant.
- Cc 14.3 (d) Because the reaction is second order, increasing the concentration of A by a factor of 5 causes the rate to increase by 5^2 or 25.
- Cc 14.4 (c) All three mixtures have the same total number of molecules, but mixture (c) has the greatest number of NO molecules. Since the reaction is second order in NO and only first order in O_2 , mixture (c) has the fastest initial rate.
- Cc 14.5 (c) The reaction is most likely second order because its rate depends on the concentration (therefore, it cannot be zero order), and its half-life depends on the initial concentration (therefore, it cannot be first order). For a second-order

reaction, a doubling of the initial concentration results in the quadrupling of the rate.

- Cc 14.6 Reaction A has a faster rate because it has a lower activation energy; therefore, the exponential factor is larger at a given temperature, making the rate constant larger. (With a larger rate constant and the same initial concentration, the rate will be faster.)
- Cc 14.7 (c) Since the reactants in part (a) are atoms, the orientation factor should be about one. The reactants in parts (b) and (c) are both molecules, so we expect orientation factors of less than one. Since the reactants in (b) are symmetrical, we would not expect the collision to have as specific an orientation requirement as in (c), where the reactants are asymmetrical and must therefore collide in such way that a hydrogen atom is in close proximity to another hydrogen atom. Therefore, we expect (c) to have the smallest orientation factor.

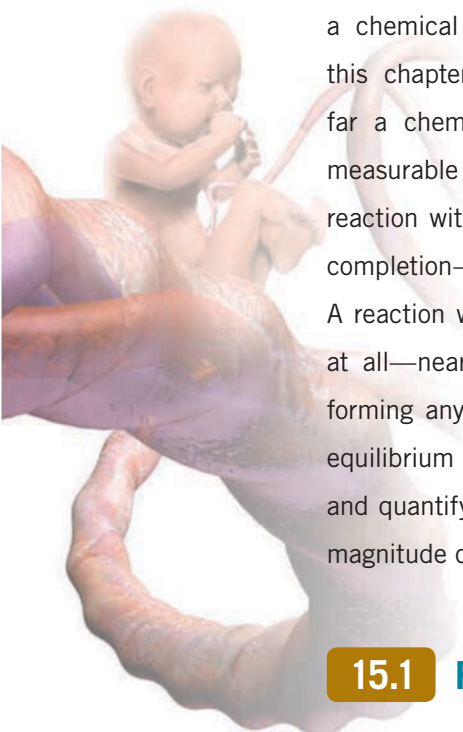
- 15.1** Fetal Hemoglobin and Equilibrium 639
- 15.2** The Concept of Dynamic Equilibrium 641
- 15.3** The Equilibrium Constant (K) 642
- 15.4** Expressing the Equilibrium Constant in Terms of Pressure 647
- 15.5** Heterogeneous Equilibria: Reactions Involving Solids and Liquids 650

- 15.6** Calculating the Equilibrium Constant from Measured Equilibrium Concentrations 651
- 15.7** The Reaction Quotient: Predicting the Direction of Change 653
- 15.8** Finding Equilibrium Concentrations 656
- 15.9** Le Châtelier's Principle: How a System at Equilibrium Responds to Disturbances 665
- Key Learning Outcomes** 673



A developing fetus gets oxygen from the mother's blood because the reaction between oxygen and fetal hemoglobin has a larger equilibrium constant than the reaction between oxygen and maternal hemoglobin.

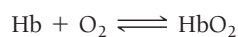
Chemical Equilibrium



IN CHAPTER 14, we examined *how fast* a chemical reaction occurs. In this chapter, we examine *how far* a chemical reaction goes. The *speed* of a chemical reaction is determined by kinetics, whereas the *extent* of a chemical reaction is determined by thermodynamics. In this chapter, we focus on describing and quantifying how far a chemical reaction goes based on an experimentally measurable quantity called *the equilibrium constant*. A reaction with a large equilibrium constant proceeds nearly to completion—nearly all the reactants react to form products. A reaction with a small equilibrium constant barely proceeds at all—nearly all the reactants remain as reactants, hardly forming any products. In this chapter, we simply accept the equilibrium constant as an experimentally measurable quantity and learn how to use it to predict and quantify the extent of a reaction. In Chapter 18, we will explore the reasons underlying the magnitude of equilibrium constants.

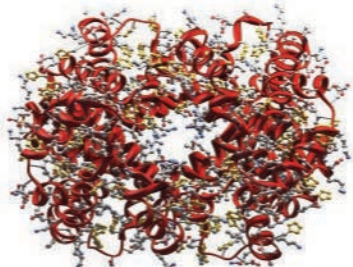
15.1 Fetal Hemoglobin and Equilibrium

Have you ever wondered how a baby in the womb gets oxygen? Unlike you and me, a fetus does not breathe air. Yet, like you and me, a fetus needs oxygen. Where does that oxygen come from? After we are born, we inhale air into our lungs and that air diffuses into capillaries, where it comes into contact with our blood. Within our red blood cells, a protein called hemoglobin (Hb) reacts with oxygen according to the chemical equation:



“Every system in chemical equilibrium, under the influence of a change of any one of the factors of equilibrium, undergoes a transformation ... [that produces a change] ... in the opposite direction of the factor in question.”

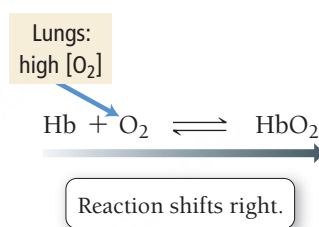
—Alfred Lotka (1880–1949)



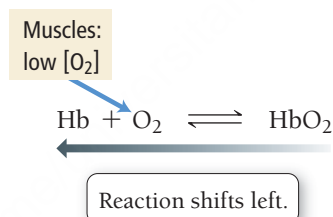
▲ Hemoglobin is the oxygen-carrying protein in red blood cells.

The double arrows in this equation indicate that the reaction can occur in both the forward and reverse directions and can reach chemical *equilibrium*. We first encountered this term in Chapter 11 (see Section 11.5), and we define it more carefully in the next section of this chapter. For now, understand that the concentrations of the reactants and products in a reaction at equilibrium are described by the *equilibrium constant*, K . A large value of K means that the reaction lies far to the right at equilibrium—a high concentration of products and a low concentration of reactants. A small value of K means that the reaction lies far to the left at equilibrium—a high concentration of reactants and a low concentration of products. In other words, the value of K is a measure of how far a reaction proceeds—the larger the value of K , the more the reaction proceeds toward the products.

The equilibrium constant for the reaction between hemoglobin and oxygen is such that hemoglobin efficiently binds oxygen at typical lung oxygen concentrations, but hemoglobin can also release oxygen under the appropriate conditions. Any system at equilibrium, including the hemoglobin–oxygen system, responds to changes in ways that maintain equilibrium. If any of the concentrations of the reactants or products change, the reaction shifts to counteract that change. For the hemoglobin system, as blood flows through the lungs where oxygen concentrations are high, the reaction shifts to the right—hemoglobin binds oxygen:

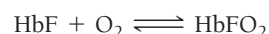


As blood flows out of the lungs and into muscles and organs where oxygen concentrations have been depleted (because muscles and organs use oxygen), the reaction shifts to the left—hemoglobin releases oxygen:



In other words, in order to maintain equilibrium, *hemoglobin binds oxygen when the surrounding oxygen concentration is high, but it releases oxygen when the surrounding oxygen concentration is low*. In this way, hemoglobin transports oxygen from the lungs to all parts of the body that use oxygen.

A fetus has its own circulatory system. The mother's blood never flows into the fetus's body, and the fetus cannot get any air in the womb. How, then, does the fetus get oxygen? The answer lies in the properties of fetal hemoglobin (HbF), which is slightly different from adult hemoglobin. Like adult hemoglobin, fetal hemoglobin is in equilibrium with oxygen:



However, the equilibrium constant for fetal hemoglobin is larger than the equilibrium constant for adult hemoglobin, meaning that the reaction tends to go farther in the direction of the product. Consequently, fetal hemoglobin loads oxygen at a lower oxygen concentration than does adult hemoglobin. In the placenta, fetal blood flows in close proximity to maternal blood. Although the two never mix, because of the different equilibrium constants, the maternal hemoglobin releases oxygen that the fetal hemoglobin then binds and carries into its own circulatory system (**Figure 15.1** ▶). Nature has evolved a chemical system through which the mother's hemoglobin can in effect *hand off* oxygen to the hemoglobin of the fetus.

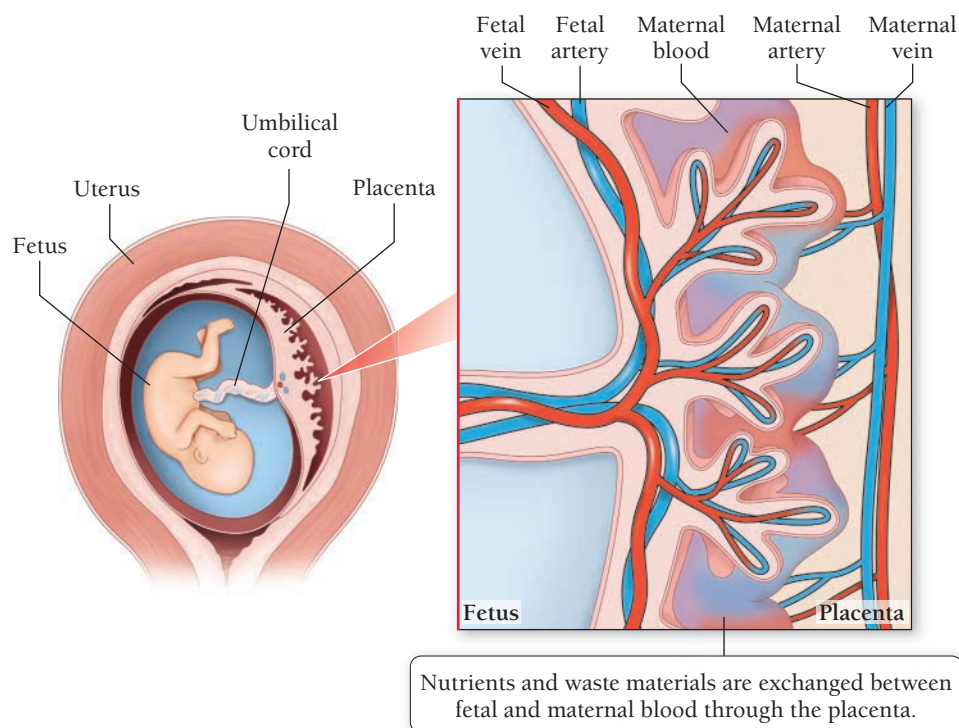
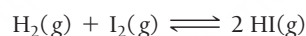


FIGURE 15.1 Oxygen Exchange between the Maternal and Fetal Circulation In the placenta, the blood of the fetus comes into close proximity with that of the mother, although the two do not mix directly. Because the reaction of fetal hemoglobin with oxygen has a larger equilibrium constant than the reaction of maternal hemoglobin with oxygen, the fetus receives oxygen from the mother's blood.

15.2 The Concept of Dynamic Equilibrium

Recall from Chapter 14 that reaction rates generally increase with increasing concentration of the reactants (unless the reaction order is zero) and decrease with decreasing concentration of the reactants. With this in mind, consider the reaction between hydrogen and iodine:



In this reaction, H_2 and I_2 react to form 2 HI molecules, but the 2 HI molecules can also react to re-form H_2 and I_2 . A reaction such as this one—that can proceed in both the forward and reverse directions—is said to be **reversible**.

Suppose we begin with only H_2 and I_2 in a container (**Figure 15.2(a)** ► on the next page). What happens? Initially, H_2 and I_2 begin to react to form HI (**Figure 15.2(b)** ►). However, as H_2 and I_2 react, their concentrations decrease, which in turn *decreases the rate of the forward reaction*. At the same time, HI begins to form. As the concentration of HI increases, the reverse reaction begins to occur at a faster and faster rate. Eventually, the rate of the reverse reaction (which has been increasing) equals the rate of the forward reaction (which has been decreasing). At that point, **dynamic equilibrium** is reached (**Figure 15.2(c, d)** ►).

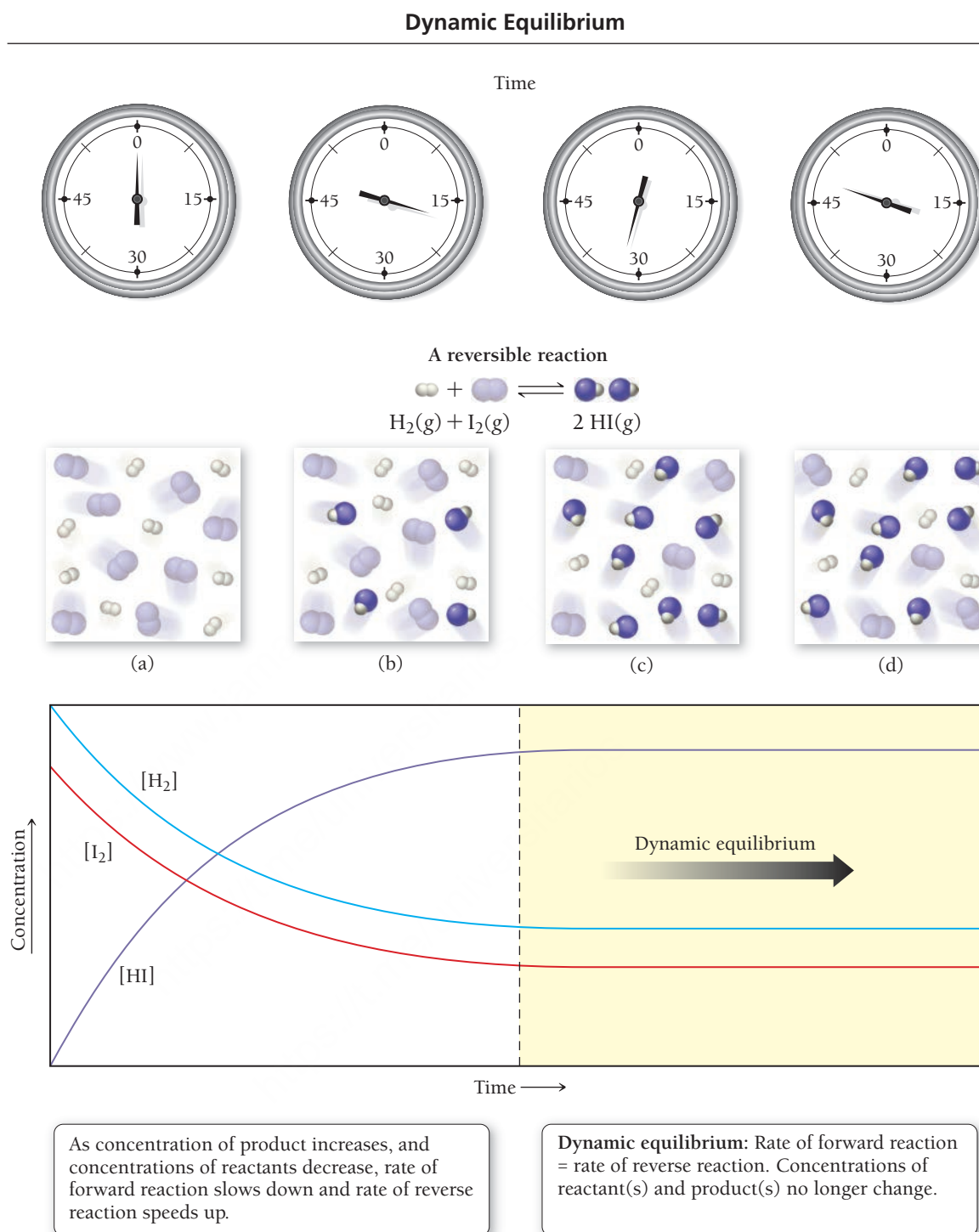
Dynamic equilibrium for a chemical reaction is the condition in which the rate of the forward reaction equals the rate of the reverse reaction.

Dynamic equilibrium is “dynamic” because the forward and reverse reactions are still occurring; however, they are occurring at the same rate. When dynamic equilibrium is reached, the concentrations of H_2 , I_2 , and HI no longer change (as long as the temperature is constant). The concentrations remain constant because the reactants and products form at the same rate that they are depleted. Note that although the concentrations of reactants and products no longer change at equilibrium, *the concentrations of reactants and products are not equal to one another* at equilibrium. Some reactions reach equilibrium only after most of the reactants have formed products; others reach equilibrium when only a small fraction of the reactants have formed products. It depends on the reaction.

Nearly all chemical reactions are at least theoretically reversible. In many cases, however, the reversibility is so small that it can be ignored.

► FIGURE 15.2 Dynamic

Equilibrium Equilibrium is reached in a chemical reaction when the concentrations of the reactants and products no longer change. The molecular images depict the progress of the reaction $\text{H}_2(\text{g}) + \text{I}_2(\text{g}) \rightleftharpoons 2 \text{HI}(\text{g})$. The graph shows the concentrations of H_2 , I_2 , and HI as a function of time. When equilibrium is reached, both the forward and reverse reactions continue, but at equal rates, so the concentrations of the reactants and products remain constant.



KEY CONCEPT VIDEO
The Equilibrium Constant

15.3 The Equilibrium Constant (K)

We have just seen that the *concentrations of reactants and products* are not equal at equilibrium—rather, the *rates of the forward and reverse reactions* are equal. So what about the concentrations? The concentrations, as we can see by reexamining Figure 15.2, become constant; they don't change once equilibrium is reached (as long as the temperature is constant). We quantify the relative concentrations of reactants and

products at equilibrium with a quantity called the *equilibrium constant* (*K*). Consider an equation for a generic chemical reaction:



where A and B are reactants, C and D are products, and *a*, *b*, *c*, and *d* are the respective stoichiometric coefficients in the chemical equation. We define the **equilibrium constant (*K*)** for the reaction as the ratio—at *equilibrium*—of the concentrations of the products raised to their stoichiometric coefficients divided by the concentrations of the reactants raised to their stoichiometric coefficients.

We distinguish between the equilibrium constant (*K*) and the Kelvin unit of temperature (K) by italicizing the equilibrium constant.

Law of Mass Action

Products

$$K = \frac{[C]^c[D]^d}{[A]^a[B]^b}$$

Reactants

In this notation, [A] represents the molar concentration of A. The equilibrium constant quantifies the relative concentrations of reactants and products *at equilibrium*. The relationship between the balanced chemical equation and the expression of the equilibrium constant is known as the **law of mass action**.

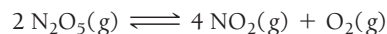
Why is *this* particular ratio of concentrations at equilibrium—and not some other ratio—defined as the equilibrium constant? Because this particular ratio always equals the same number at equilibrium (at constant temperature), regardless of the initial concentrations of the reactants and products. For example, Table 15.1 shows several different equilibrium concentrations of H₂, I₂, and HI, each from a different set of initial concentrations. Notice that the ratio defined by the law of mass action is always the same, regardless of the initial concentrations. Whether we start with only reactants or only products, the reaction reaches equilibrium at concentrations in which the equilibrium constant is the same. No matter what the initial concentrations are, the reaction always goes in a direction that ensures that the equilibrium concentrations—when substituted into the equilibrium expression—result in the same constant, *K* (at constant temperature).

TABLE 15.1 Initial and Equilibrium Concentrations for the Reaction
H₂(g) + I₂(g) ⇌ 2 HI(g) at 445 °C

Initial Concentrations			Equilibrium Concentrations			Equilibrium Constant as Defined by the Law of Mass Action
[H ₂]	[I ₂]	[HI]	[H ₂]	[I ₂]	[HI]	$K = \frac{[HI]^2}{[H_2][I_2]}$
0.50	0.50	0.0	0.11	0.11	0.78	$\frac{(0.78)^2}{(0.11)(0.11)} = 50$
0.0	0.0	0.50	0.055	0.055	0.39	$\frac{(0.39)^2}{(0.055)(0.055)} = 50$
0.50	0.50	0.50	0.165	0.165	1.17	$\frac{(1.17)^2}{(0.165)(0.165)} = 50$
1.0	0.50	0.0	0.53	0.033	0.934	$\frac{(0.934)^2}{(0.53)(0.033)} = 50$
0.50	1.0	0.0	0.033	0.53	0.934	$\frac{(0.934)^2}{(0.033)(0.53)} = 50$

Expressing Equilibrium Constants for Chemical Reactions

To express an equilibrium constant for a chemical reaction, we examine the balanced chemical equation and apply the law of mass action. For example, suppose we want to express the equilibrium constant for the reaction:



The equilibrium constant is $[\text{NO}_2]$ raised to the fourth power multiplied by $[\text{O}_2]$ raised to the first power divided by $[\text{N}_2\text{O}_5]$ raised to the second power:

$$K = \frac{[\text{NO}_2]^4[\text{O}_2]}{[\text{N}_2\text{O}_5]^2}$$

Notice that the *coefficients* in the chemical equation become the *exponents* in the expression of the equilibrium constant.

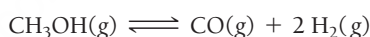
EXAMPLE 15.1

Expressing Equilibrium Constants for Chemical Equations

Interactive
Worked Example
Video 15.1

PEARSON
eText
2.0

Express the equilibrium constant for the chemical equation:




SOLUTION

The equilibrium constant is the equilibrium concentrations of the products raised to their stoichiometric coefficients divided by the equilibrium concentrations of the reactants raised to their stoichiometric coefficients.

$$K = \frac{[\text{CO}][\text{H}_2]^2}{[\text{CH}_3\text{OH}]}$$

FOR PRACTICE 15.1

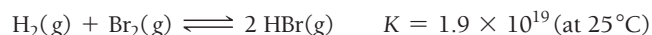
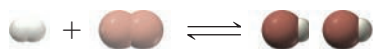
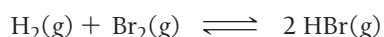
Express the equilibrium constant for the combustion of propane as shown by the balanced chemical equation:



The Significance of the Equilibrium Constant

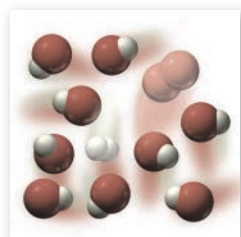
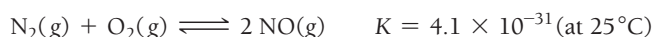
We now know how to express the equilibrium constant, but what does it mean? What, for example, does a large equilibrium constant ($K \gg 1$) imply about a reaction? A large equilibrium constant indicates that the numerator (which specifies the amounts of products at equilibrium) is larger than the denominator (which specifies the amounts of reactants at equilibrium). Therefore, when the equilibrium

constant is large, the forward reaction is favored. For example, consider the reaction:



The equilibrium constant is large, indicating that the equilibrium point for the reaction lies far to the right—high concentrations of products, low concentrations of reactants (**Figure 15.3**). Remember that the equilibrium constant says nothing about *how fast* a reaction reaches equilibrium, only *how far* the reaction has proceeded once equilibrium is reached. A reaction with a large equilibrium constant may be kinetically very slow and take a long time to reach equilibrium.

Conversely, what does a *small* equilibrium constant ($K \ll 1$) mean? It indicates that the reverse reaction is favored and that there will be more reactants than products when equilibrium is reached. For example, consider the reaction:



$$K = \frac{[\text{HBr}]^2}{[\text{H}_2][\text{Br}_2]} = \text{large number}$$

▲ FIGURE 15.3 The Meaning of a Large Equilibrium Constant If the equilibrium constant for a reaction is large, the equilibrium point of the reaction lies far to the right—the concentration of products is large and the concentration of reactants is small.

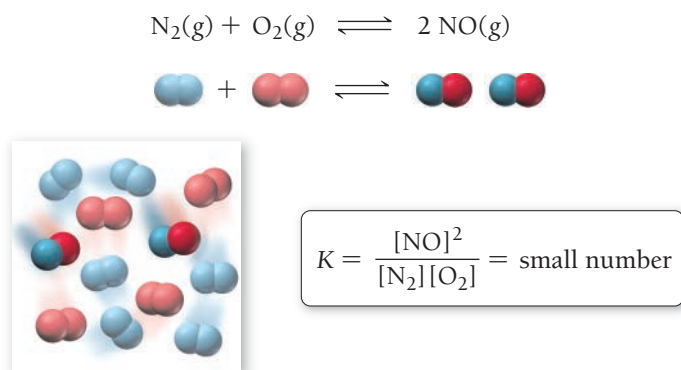


FIGURE 15.4 The Meaning of a Small Equilibrium Constant If the equilibrium constant for a reaction is small, the equilibrium point of the reaction lies far to the left—the concentration of products is small and the concentration of reactants is large.

The equilibrium constant is very small, indicating that the equilibrium point for the reaction lies far to the left—high concentrations of reactants, low concentrations of products (**Figure 15.4**). This is fortunate because N_2 and O_2 are the main components of air. If this equilibrium constant were large, much of the N_2 and O_2 in air would react to form NO, a toxic gas.

Direct comparison of equilibrium constants is valid only when the stoichiometry of the corresponding reactions is the same.

Summarizing the Significance of the Equilibrium Constant:

- $K \ll 1$ Reverse reaction is favored; forward reaction does not proceed very far.
- $K \approx 1$ Neither direction is favored; forward reaction proceeds about halfway.
- $K \gg 1$ Forward reaction is favored; forward reaction proceeds essentially to completion.

Equilibrium Constants

The equilibrium constant for the reaction $\text{A}(\text{g}) \rightleftharpoons \text{B}(\text{g})$ is 10. A reaction mixture initially contains $[\text{A}] = 1.1 \text{ M}$ and $[\text{B}] = 0.0 \text{ M}$. Which statement about this reaction is true at equilibrium?

- The reaction mixture contains $[\text{A}] = 1.0 \text{ M}$ and $[\text{B}] = 0.1 \text{ M}$.
- The reaction mixture contains $[\text{A}] = 0.1 \text{ M}$ and $[\text{B}] = 1.0 \text{ M}$.
- The reaction mixture contains equal concentrations of A and B.

15.1

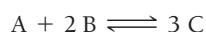
Cc

Conceptual
Connection

Relationships between the Equilibrium Constant and the Chemical Equation

If a chemical equation is modified in some way, the equilibrium constant for the equation changes because of the modification. The three modifications we list and discuss here are common.

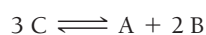
1. If we reverse the equation, we invert the equilibrium constant. For example, consider this equilibrium equation:



The expression for the equilibrium constant of this reaction is:

$$K_{\text{forward}} = \frac{[\text{C}]^3}{[\text{A}][\text{B}]^2}$$

If we reverse the equation:



then, according to the law of mass action, the expression for the equilibrium constant becomes:

$$K_{\text{reverse}} = \frac{[\text{A}][\text{B}]^2}{[\text{C}]^3} = \frac{1}{K_{\text{forward}}}$$

2. If we multiply the coefficients in the equation by a factor, we raise the equilibrium constant to the same factor. Consider again this chemical equation and corresponding expression for the equilibrium constant:



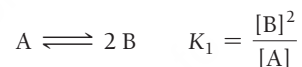
If we multiply the equation by n , we get:



Applying the law of mass action, the expression for the equilibrium constant becomes:

$$K' = \frac{[C]^{3n}}{[A]^n[B]^{2n}} = \left(\frac{[C]^3}{[A][B]^2} \right)^n = K^n$$

3. If we add two or more individual chemical equations to obtain an overall equation, we multiply the corresponding equilibrium constants by each other to obtain the overall equilibrium constant. Consider these two chemical equations and their corresponding equilibrium constant expressions:



The two equations sum as follows:



According to the law of mass action, the equilibrium constant for this overall equation is then:

$$K_{\text{overall}} = \frac{[C]^3}{[A]}$$

Notice that K_{overall} is the product of K_1 and K_2 :

$$\begin{aligned} K_{\text{overall}} &= K_1 \times K_2 \\ &= \frac{[B]^2}{[A]} \times \frac{[C]^3}{[B]^2} \\ &= \frac{[C]^3}{[A]} \end{aligned}$$



15.2 Cc

Conceptual
Connection

The Equilibrium Constant and the Chemical Equation

The reaction $A(g) \rightleftharpoons 2 B(g)$ has an equilibrium constant of $K = 0.010$. What is the equilibrium constant for the reaction $B(g) \rightleftharpoons \frac{1}{2} A(g)$?

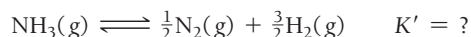
- (a) 1
- (b) 10
- (c) 100
- (d) 0.0010

EXAMPLE 15.2**Manipulating the Equilibrium Constant to Reflect Changes in the Chemical Equation**

Consider the chemical equation and equilibrium constant for the synthesis of ammonia at 25°C:



Calculate the equilibrium constant for the following reaction at 25°C:

**SOLUTION**

You want to manipulate the given reaction and value of K to obtain the desired reaction and value of K . Note that the given reaction is the reverse of the desired reaction, and its coefficients are twice those of the desired reaction.

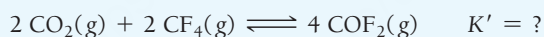
Begin by reversing the given reaction and taking the inverse of the value of K .	$\text{N}_2(\text{g}) + 3 \text{H}_2(\text{g}) \rightleftharpoons 2 \text{NH}_3(\text{g}) \quad K = 5.6 \times 10^5$ $2 \text{NH}_3(\text{g}) \rightleftharpoons \text{N}_2(\text{g}) + 3 \text{H}_2(\text{g}) \quad K_{\text{reverse}} = \frac{1}{5.6 \times 10^5}$
Next, multiply the reaction by $\frac{1}{2}$ and raise the equilibrium constant to the $\frac{1}{2}$ power.	$\text{NH}_3(\text{g}) \rightleftharpoons \frac{1}{2} \text{N}_2(\text{g}) + \frac{3}{2} \text{H}_2(\text{g})$ $K' = K_{\text{reverse}}^{1/2} = \left(\frac{1}{5.6 \times 10^5} \right)^{1/2}$
Calculate the value of K' .	$K' = 1.3 \times 10^{-3}$

FOR PRACTICE 15.2

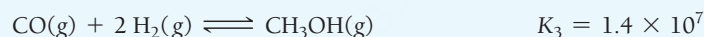
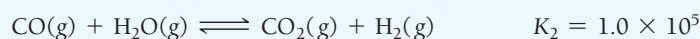
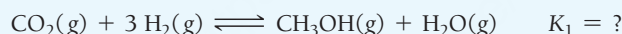
Consider the following chemical equation and equilibrium constant at 25°C:




Calculate the equilibrium constant for the following reaction at 25°C:

**FOR MORE PRACTICE 15.2**

Predict the equilibrium constant for the first reaction given the equilibrium constants for the second and third reactions:

**15.4 Expressing the Equilibrium Constant in Terms of Pressure**

So far, we have expressed the equilibrium constant only in terms of the *concentrations* of the reactants and products. For gaseous reactions, the partial pressure of a particular gas is proportional to its concentration. Therefore, we can also express the equilibrium constant in terms of the *partial pressures* of the reactants and products. Consider the gaseous reaction:



From this point on, we designate K_c as the equilibrium constant with respect to concentration in molarity. For the reaction just given, we can express K_c using the law of mass action:

$$K_c = \frac{[\text{SO}_2]^2[\text{O}_2]}{[\text{SO}_3]^2}$$

We now designate K_p as the equilibrium constant with respect to partial pressures in atmospheres. The expression for K_p takes the form of the expression for K_c , except that we use the partial pressure of each gas in place of its concentration. For the SO_3 reaction, we write K_p as:

$$K_p = \frac{(P_{\text{SO}_2})^2 P_{\text{O}_2}}{(P_{\text{SO}_3})^2}$$

where P_A is the partial pressure of gas A in units of atmospheres.

Because the partial pressure of a gas in atmospheres is not the same as its concentration in molarity, the value of K_p for a reaction is not necessarily equal to the value of K_c . However, as long as the gases are behaving ideally, we can derive a relationship between the two constants. The concentration of an ideal gas A is the number of moles of A (n_A) divided by its volume (V) in liters:

$$[A] = \frac{n_A}{V}$$

From the ideal gas law, we can relate the quantity n_A/V to the partial pressure of A as follows:

$$P_A V = n_A RT$$

$$P_A = \frac{n_A}{V} RT$$

Since $[A] = n_A/V$, we can write:

$$P_A = [A]RT \quad \text{or} \quad [A] = \frac{P_A}{RT} \quad [15.1]$$

Now consider the following general equilibrium chemical equation:



According to the law of mass action, we write K_c as follows:

$$K_c = \frac{[C]^c [D]^d}{[A]^a [B]^b}$$

Substituting $[X] = P_X/RT$ for each concentration term, we get:

$$\begin{aligned} K_c &= \frac{\left(\frac{P_C}{RT}\right)^c \left(\frac{P_D}{RT}\right)^d}{\left(\frac{P_A}{RT}\right)^a \left(\frac{P_B}{RT}\right)^b} = \frac{P_C^c P_D^d \left(\frac{1}{RT}\right)^{c+d}}{P_A^a P_B^b \left(\frac{1}{RT}\right)^{a+b}} = \frac{P_C^c P_D^d}{P_A^a P_B^b} \left(\frac{1}{RT}\right)^{c+d-(a+b)} \\ &= K_p \left(\frac{1}{RT}\right)^{c+d-(a+b)} \end{aligned}$$

Rearranging,

$$K_p = K_c (RT)^{c+d-(a+b)}$$

Finally, if we let $\Delta n = c + d - (a + b)$, which is the sum of the stoichiometric coefficients of the gaseous products minus the sum of the stoichiometric coefficients of the gaseous reactants, we get the following general result:

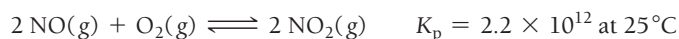
$$K_p = K_c (RT)^{\Delta n} \quad [15.2]$$

In the equation $K_p = K_c (RT)^{\Delta n}$ the quantity Δn represents the difference between the number of moles of gaseous products and gaseous reactants.

Notice that if the total number of moles of gas is the same after the reaction as before, $\Delta n = 0$, and K_p is equal to K_c .

EXAMPLE 15.3**Relating K_p and K_c**

Nitrogen monoxide, a pollutant in automobile exhaust, is oxidized to nitrogen dioxide in the atmosphere according to the equation:



Find K_c for this reaction.

SORT You are given K_p for the reaction and asked to find K_c .

GIVEN: $K_p = 2.2 \times 10^{12}$

FIND: K_c

STRATEGIZE Use Equation 15.2 to relate K_p and K_c .

EQUATION $K_p = K_c(RT)^{\Delta n}$

SOLVE Solve the equation for K_c .

SOLUTION

$$K_c = \frac{K_p}{(RT)^{\Delta n}}$$

$$\Delta n = 2 - 3 = -1$$

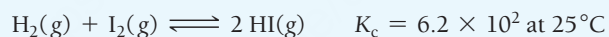
$$K_c = \frac{2.2 \times 10^{12}}{\left(0.08206 \frac{\text{L} \cdot \text{atm}}{\text{mol} \cdot \text{K}} \times 298 \text{ K}\right)^{-1}} = 5.4 \times 10^{13}$$

CHECK The most straightforward way to check this answer is to substitute it back into Equation 15.2 and confirm that you get the original value for K_p .

$$\begin{aligned} K_p &= K_c(RT)^{\Delta n} \\ &= 5.4 \times 10^{13} \left(0.08206 \frac{\text{L} \cdot \text{atm}}{\text{mol} \cdot \text{K}} \times 298 \text{ K}\right)^{-1} \\ &= 2.2 \times 10^{12} \end{aligned}$$

FOR PRACTICE 15.3

Consider the following reaction and corresponding value of K_c :



What is the value of K_p at this temperature?

Units of K

Throughout this book, we express concentrations and partial pressures within the equilibrium constant expression in units of molarity and atmospheres, respectively. When expressing the value of the equilibrium constant, however, we have not included the units. Formally, the values of concentration or partial pressure that we substitute into the equilibrium constant expression are ratios of the concentration or pressure to a reference concentration (exactly 1 M) or a reference pressure (exactly 1 atm).

For example, within the equilibrium constant expression, a pressure of 1.5 atm becomes:

$$\frac{1.5 \text{ atm}}{1 \text{ atm}} = 1.5$$

Similarly, a concentration of 1.5 M becomes:

$$\frac{1.5 \text{ M}}{1 \text{ M}} = 1.5$$

As long as concentration units are expressed in molarity for K_c and pressure units are expressed in atmospheres for K_p , we skip this formality and enter the quantities directly into the equilibrium expression, dropping their corresponding units.



15.3

Cc

Conceptual
Connection

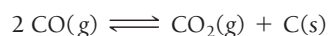
The Relationship between K_p and K_c

Under which circumstances are K_p and K_c equal for the reaction $aA(g) + bB(g) \rightleftharpoons cC(g) + dD(g)$?

- (a) when $a + b = c + d$
- (b) when the reaction is reversible
- (c) when the equilibrium constant is small

15.5 Heterogeneous Equilibria: Reactions Involving Solids and Liquids

Many chemical reactions involve pure solids or pure liquids as reactants or products. Consider, for example, the reaction:




We might expect the expression for the equilibrium constant to be:

$$K_c = \frac{[\text{CO}_2][\text{C}]}{[\text{CO}]^2} \quad (\text{incorrect})$$

However, since carbon is a solid, its concentration is constant (if we double the amount of carbon, its *concentration* remains the same). The concentration of a solid does not change because a solid does not expand to fill its container. Its concentration, therefore, depends only on its density, which is constant as long as *some* solid is present (**Figure 15.5** ▼). Consequently, pure solids—those reactants or products labeled in the chemical equation with an (s)—are not included in the equilibrium expression (because their constant value is incorporated into the value of K). The correct equilibrium expression for this reaction is therefore:

$$K_c = \frac{[\text{CO}_2]}{[\text{CO}]^2}$$

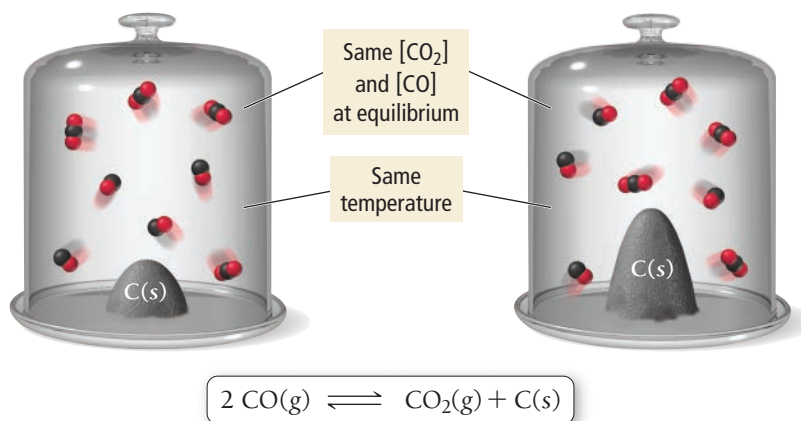
Similarly, the concentration of a pure liquid does not change. So, pure liquids—reactants or products labeled in the chemical equation with an (l)—are also excluded from the equilibrium expression. For example, consider the equilibrium expression for the reaction between carbon dioxide and water:



Since $\text{H}_2\text{O}(l)$ is pure liquid, we omit it from the equilibrium expression:

$$K_c = \frac{[\text{H}^+][\text{HCO}_3^-]}{[\text{CO}_2]}$$

A Heterogeneous Equilibrium



► **FIGURE 15.5 Heterogeneous Equilibrium** The concentration of solid carbon (the number of atoms per unit volume) is constant as long as some solid carbon is present. The same is true for pure liquids. For this reason, the concentrations of solids and pure liquids are not included in equilibrium constant expressions.

EXAMPLE 15.4**Writing Equilibrium Expressions for Reactions Involving a Solid or a Liquid**

Write an expression for the equilibrium constant (K_c) for the chemical equation.


**SOLUTION**

Because $\text{CaCO}_3(\text{s})$ and $\text{CaO}(\text{s})$ are both solids, omit them from the equilibrium expression.

$$K_c = [\text{CO}_2]$$

FOR PRACTICE 15.4

Write an equilibrium expression (K_c) for the equation.

**Heterogeneous Equilibria, K_p and K_c**

For which reaction does $K_p = K_c$?

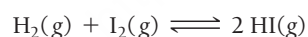
- (a) $2 \text{Na}_2\text{O}_2(\text{s}) + 2 \text{CO}_2(\text{g}) \rightleftharpoons 2 \text{Na}_2\text{CO}_3(\text{s}) + \text{O}_2(\text{g})$
- (b) $\text{Fe}_2\text{O}_3(\text{s}) + 3 \text{CO}(\text{g}) \rightleftharpoons 2 \text{Fe}(\text{s}) + 3 \text{CO}_2(\text{g})$
- (c) $\text{NH}_4\text{NO}_3(\text{s}) \rightleftharpoons \text{N}_2\text{O}(\text{g}) + 2 \text{H}_2\text{O}(\text{g})$

15.4**Cc**

Conceptual
Connection

**15.6 Calculating the Equilibrium Constant from Measured Equilibrium Concentrations**

The most direct way to obtain an experimental value for the equilibrium constant of a reaction is to measure the concentrations of the reactants and products in a reaction mixture at equilibrium. Consider again the reaction between hydrogen and iodine to form hydrogen iodide:




We saw in Table 15.1 (see Section 15.3) that the measured concentrations of the reactants and products, when substituted into the expression for K , always equal a constant (the equilibrium constant) at a constant temperature. For example, one set of measurements at 445°C results in equilibrium concentrations of $[\text{H}_2] = 0.11 \text{ M}$, $[\text{I}_2] = 0.11 \text{ M}$, and $[\text{HI}] = 0.78 \text{ M}$. What is the value of the equilibrium constant at this temperature? We can write the expression for K_c from the balanced equation and substitute the equilibrium concentrations to obtain the value of K_c :

$$\begin{aligned} K_c &= \frac{[\text{HI}]^2}{[\text{H}_2][\text{I}_2]} \\ &= \frac{(0.78)^2}{(0.11)(0.11)} \\ &= 5.0 \times 10^1 \end{aligned}$$

The concentrations within K_c should always be written in moles per liter (M); however, as noted in Section 15.4, we do not normally include the units when expressing the value of the equilibrium constant, so K_c is unitless.

We just calculated the equilibrium constant from values of the equilibrium concentrations of all the reactants and products. In most cases, however, we need only know the initial concentrations of the reactant(s) and the equilibrium concentration of any *one* reactant or product. We can deduce the other equilibrium concentrations from the stoichiometry of the reaction. For example, consider the simple reaction:



Because equilibrium constants depend on temperature, many equilibrium problems state the temperature even though it has no formal part in the calculation.

Suppose that we have a reaction mixture in which the initial concentration of A is 1.00 M and the initial concentration of B is 0.00 M. When equilibrium is reached, the concentration of A is 0.75 M. Since [A] has changed by -0.25 M, we can deduce (based on the stoichiometry) that [B] must have changed by $2 \times (+0.25$ M) or $+0.50$ M. We summarize the initial conditions, the changes, and the equilibrium conditions in the following table:

	[A]	[B]
Initial	1.00	0.00
Change	-0.25	$+2(0.25)$
Equilibrium	0.75	0.50

The last row in an ICE table is the sum of the two rows above it.

We refer to this type of table as an ICE table (I = initial, C = change, E = equilibrium). To calculate the equilibrium constant, we use the balanced equation to write an expression for the equilibrium constant and then substitute the equilibrium concentrations from the ICE table:

$$K = \frac{[B]^2}{[A]} = \frac{(0.50)^2}{(0.75)} = 0.33$$

In Examples 15.5 and 15.6, the general procedure for solving these kinds of equilibrium problems is in the left column, and two worked examples exemplifying the procedure are in the center and right columns.

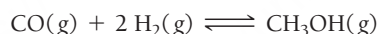
Interactive Worked
Example Video 15.5



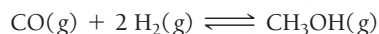
EXAMPLE 15.5

Finding Equilibrium Constants from Experimental Concentration Measurements

Consider the following reaction:



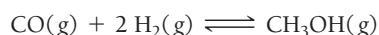
A reaction mixture at 780°C initially contains $[\text{CO}] = 0.500$ M and $[\text{H}_2] = 1.00$ M. At equilibrium, the CO concentration is 0.15 M. What is the value of the equilibrium constant?



	[CO]	[H ₂]	[CH ₃ OH]
Initial	0.500	1.00	0.00
Change			
Equil	0.15		

- Using the balanced equation as a guide, prepare an ICE table showing the known initial concentrations and equilibrium concentrations of the reactants and products. Leave space in the middle of the table for determining the changes in concentration that occur during the reaction. If initial concentrations of some reactants or products are not given, you may assume they are zero.

- For the reactant or product whose concentration is known both initially and at equilibrium, calculate the change in concentration that occurs.



	[CO]	[H ₂]	[CH ₃ OH]
Initial	0.500	1.00	0.00
Change	-0.35		
Equil	0.15		

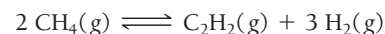
EXAMPLE 15.6

Finding Equilibrium Constants from Experimental Concentration Measurements

Consider the following reaction:



A reaction mixture at 1700°C initially contains $[\text{CH}_4] = 0.115$ M. At equilibrium, the mixture contains $[\text{C}_2\text{H}_2] = 0.035$ M. What is the value of the equilibrium constant?



	[CH ₄]	[C ₂ H ₂]	[H ₂]
Initial	0.115	0.00	0.00
Change			
Equil		0.035	



	[CH ₄]	[C ₂ H ₂]	[H ₂]
Initial	0.115	0.00	0.00
Change		$+0.035$	
Equil		0.035	

3. Use the change calculated in Step 2 and the stoichiometric relationships from the balanced chemical equation to determine the changes in concentration of all other reactants and products. Since reactants are consumed during the reaction, the changes in their concentrations are negative. Since products are formed, the changes in their concentrations are positive.	$\text{CO(g)} + 2 \text{H}_2\text{(g)} \rightleftharpoons \text{CH}_3\text{OH(g)}$ <table><tr><th></th><th>[CO]</th><th>[H₂]</th><th>[CH₃OH]</th></tr><tr><td>Initial</td><td>0.500</td><td>1.00</td><td>0.00</td></tr><tr><td>Change</td><td>-0.35</td><td>-2(0.35)</td><td>+0.35</td></tr><tr><td>Equil</td><td>0.15</td><td></td><td></td></tr></table>		[CO]	[H ₂]	[CH ₃ OH]	Initial	0.500	1.00	0.00	Change	-0.35	-2(0.35)	+0.35	Equil	0.15			$2 \text{CH}_4\text{(g)} \rightleftharpoons \text{C}_2\text{H}_2\text{(g)} + 3 \text{H}_2\text{(g)}$ <table><tr><th></th><th>[CH₄]</th><th>[C₂H₂]</th><th>[H₂]</th></tr><tr><td>Initial</td><td>0.115</td><td>0.00</td><td>0.00</td></tr><tr><td>Change</td><td>-2(0.035)</td><td>+0.035</td><td>+3(0.035)</td></tr><tr><td>Equil</td><td></td><td>0.035</td><td></td></tr></table>		[CH ₄]	[C ₂ H ₂]	[H ₂]	Initial	0.115	0.00	0.00	Change	-2(0.035)	+0.035	+3(0.035)	Equil		0.035	
	[CO]	[H ₂]	[CH ₃ OH]																															
Initial	0.500	1.00	0.00																															
Change	-0.35	-2(0.35)	+0.35																															
Equil	0.15																																	
	[CH ₄]	[C ₂ H ₂]	[H ₂]																															
Initial	0.115	0.00	0.00																															
Change	-2(0.035)	+0.035	+3(0.035)																															
Equil		0.035																																
4. Sum each column for each reactant and product to determine the equilibrium concentrations.	<table><tr><th></th><th>[CO]</th><th>[H₂]</th><th>[CH₃OH]</th></tr><tr><td>Initial</td><td>0.500</td><td>1.00</td><td>0.00</td></tr><tr><td>Change</td><td>-0.35</td><td>-0.70</td><td>+0.35</td></tr><tr><td>Equil</td><td>0.15</td><td>0.30</td><td>0.35</td></tr></table>		[CO]	[H ₂]	[CH ₃ OH]	Initial	0.500	1.00	0.00	Change	-0.35	-0.70	+0.35	Equil	0.15	0.30	0.35	<table><tr><th></th><th>[CH₄]</th><th>[C₂H₂]</th><th>[H₂]</th></tr><tr><td>Initial</td><td>0.115</td><td>0.00</td><td>0.00</td></tr><tr><td>Change</td><td>-0.070</td><td>+0.035</td><td>+0.105</td></tr><tr><td>Equil</td><td>0.045</td><td>0.035</td><td>0.105</td></tr></table>		[CH ₄]	[C ₂ H ₂]	[H ₂]	Initial	0.115	0.00	0.00	Change	-0.070	+0.035	+0.105	Equil	0.045	0.035	0.105
	[CO]	[H ₂]	[CH ₃ OH]																															
Initial	0.500	1.00	0.00																															
Change	-0.35	-0.70	+0.35																															
Equil	0.15	0.30	0.35																															
	[CH ₄]	[C ₂ H ₂]	[H ₂]																															
Initial	0.115	0.00	0.00																															
Change	-0.070	+0.035	+0.105																															
Equil	0.045	0.035	0.105																															
5. Use the balanced equation to write an expression for the equilibrium constant and substitute the equilibrium concentrations to calculate K.	$K_c = \frac{[\text{CH}_3\text{OH}]}{[\text{CO}][\text{H}_2]^2}$ $= \frac{0.35}{(0.15)(0.30)^2}$ $= 26$	$K_c = \frac{[\text{C}_2\text{H}_2][\text{H}_2]^3}{[\text{CH}_4]^2}$ $= \frac{(0.035)(0.105)^3}{(0.045)^2}$ $= 0.020$																																
	FOR PRACTICE 15.5 <p>The reaction in Example 15.5 between CO and H₂ is carried out at a different temperature with initial concentrations of [CO] = 0.27 M and [H₂] = 0.49 M. At equilibrium, the concentration of CH₃OH is 0.11 M. Find the equilibrium constant at this temperature.</p>	FOR PRACTICE 15.6 <p>The reaction of CH₄ in Example 15.6 is carried out at a different temperature with an initial concentration of [CH₄] = 0.087 M. At equilibrium, the concentration of H₂ is 0.012 M. Find the equilibrium constant at this temperature.</p>																																

15.7 The Reaction Quotient: Predicting the Direction of Change

When the reactants of a chemical reaction mix, they generally react to form products—we say that the reaction proceeds to the right (toward the products). The amount of products formed when equilibrium is reached depends on the magnitude of the equilibrium constant, as we have seen. However, what if a reaction mixture not at equilibrium contains both reactants *and* products? Can we predict the direction of change for such a mixture?

To gauge the progress of a reaction relative to equilibrium, we use a quantity called the *reaction quotient*. The definition of the reaction quotient takes the same form as the definition of the equilibrium constant, except that the reaction need not be at equilibrium. So, for the general reaction:



we define the **reaction quotient (Q_c)** as the ratio—at any point in the reaction—of the concentrations of the products raised to their stoichiometric coefficients divided by the concentrations of the reactants raised to their stoichiometric coefficients. For gases with amounts measured in atmospheres, the reaction quotient uses the partial pressures in place of concentrations and is called Q_p :

$$Q_c = \frac{[C]^c[D]^d}{[A]^a[B]^b} \quad Q_p = \frac{P_C^c P_D^d}{P_A^a P_B^b}$$

The difference between the reaction quotient and the equilibrium constant is that, at a given temperature, the equilibrium constant has only one value and it specifies the relative amounts of reactants and products *at equilibrium*. The reaction quotient, by contrast, depends on the current state of the reaction and has many different values as the reaction proceeds. For example, in a reaction mixture containing only reactants, the reaction quotient is zero ($Q_c = 0$):

$$Q_c = \frac{[0]^c[0]^d}{[A]^a[B]^b} = 0$$

In a reaction mixture containing only products, the reaction quotient is infinite ($Q_c = \infty$):

$$Q_c = \frac{[C]^c[D]^d}{[0]^a[0]^b} = \infty$$

In a reaction mixture containing both reactants and products, each at a concentration of 1 M, the reaction quotient is one ($Q_c = 1$):

$$Q_c = \frac{[1]^c[1]^d}{[1]^a[1]^b} = 1$$

The reaction quotient is useful because *the value of Q relative to K is a measure of the progress of the reaction toward equilibrium. At equilibrium, the reaction quotient is equal to the equilibrium constant.* **Figure 15.6** ► shows a plot of Q as a function of the concentrations of A and B for the simple reaction $A(g) \rightleftharpoons B(g)$, which has an equilibrium constant of $K = 1.45$. The following points are representative of three possible conditions:

Q	K	Predicted Direction of Reaction
0.55	1.45	To the right (toward products)
2.55	1.45	To the left (toward reactants)
1.45	1.45	No change (at equilibrium)

For the first set of values in the table, Q is less than K and must therefore get larger as the reaction proceeds toward equilibrium. Q becomes larger as the reactant concentration decreases and the product concentration increases—the reaction proceeds to the right. For the second set of values, Q is greater than K and must therefore get smaller as the reaction proceeds toward equilibrium. Q gets smaller as the reactant concentration increases and the product concentration decreases—the reaction proceeds to the left. In the third set of values, $Q = K$, implying that the reaction is at equilibrium—the reaction will not proceed in either direction.

Summarizing Direction of Change Predictions:

The reaction quotient (Q) relative to the equilibrium constant (K) is a measure of the progress of a reaction toward equilibrium.

- $Q < K$ Reaction goes to the right (toward products).
- $Q > K$ Reaction goes to the left (toward reactants).
- $Q = K$ Reaction is at equilibrium.

Q, K, and the Direction of a Reaction

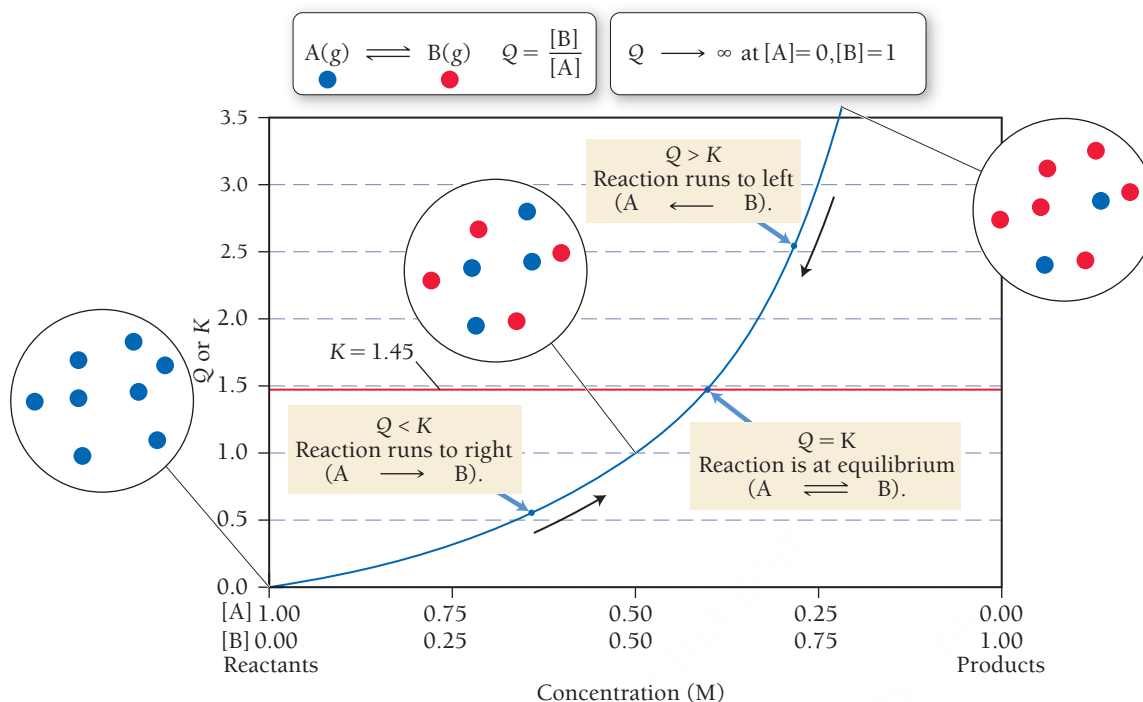
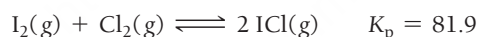


FIGURE 15.6 Q, K, and the Direction of a Reaction The graph shows a plot of Q as a function of the concentrations of the reactants and products in a simple reaction $A \rightleftharpoons B$ in which $K = 1.45$ and the sum of the reactant and product concentrations is 1 M. The far left of the graph represents pure reactant, and the far right represents pure product. The midpoint of the graph represents an equal mixture of A and B. When Q is less than K , the reaction moves in the forward direction ($A \rightarrow B$). When Q is greater than K , the reaction moves in the reverse direction ($A \leftarrow B$). When Q is equal to K , the reaction is at equilibrium.

EXAMPLE 15.7**Predicting the Direction of a Reaction by Comparing Q and K**

Consider the reaction and its equilibrium constant.



A reaction mixture contains $P_{I_2} = 0.114$ atm, $P_{Cl_2} = 0.102$ atm, and $P_{ICl} = 0.355$ atm. Is the reaction mixture at equilibrium? If not, in which direction will the reaction proceed?

SOLUTION

To determine the progress of the reaction relative to the equilibrium state, first calculate Q .

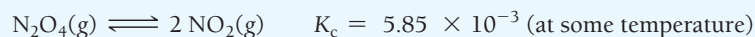
$$\begin{aligned} Q_p &= \left(\frac{P_{ICl}^2}{P_{I_2} P_{Cl_2}} \right) \\ &= \frac{(0.355)^2}{(0.114)(0.102)} \\ &= 10.8 \end{aligned}$$

Compare Q to K .

$Q_p = 10.8$; $K_p = 81.9$
Since $Q_p < K_p$, the reaction is not at equilibrium and will proceed to the right.

FOR PRACTICE 15.7

Consider the reaction and its equilibrium constant.



A reaction mixture contains $[NO_2] = 0.0255$ M and $[N_2O_4] = 0.0331$ M. Calculate Q_c and determine the direction in which the reaction will proceed.



15.5

Cc

Conceptual
Connection

Q and K

For the reaction $\text{N}_2\text{O}_4(\text{g}) \rightleftharpoons 2 \text{NO}_2(\text{g})$, a reaction mixture at a certain temperature initially contains both N_2O_4 and NO_2 in their standard states (see the definition of standard state in Section 9.10). If $K_p = 0.15$, which statement is true of the reaction mixture before any reaction occurs?

- (a) $Q = K$; the reaction is at equilibrium.
- (b) $Q < K$; the reaction will proceed to the right.
- (c) $Q > K$; the reaction will proceed to the left.



KEY CONCEPT VIDEO
**Finding Equilibrium
Concentrations from Initial
Concentrations**

15.8 Finding Equilibrium Concentrations

In Section 15.6, we discussed how to calculate an equilibrium constant from the equilibrium concentrations of the reactants and products. Just as commonly, we will want to calculate equilibrium concentrations of reactants or products from the equilibrium constant. These kinds of calculations are important because they allow us to calculate the amount of a reactant or product at equilibrium. For example, in a synthesis reaction, we might want to know how much of the product forms when the reaction reaches equilibrium. Or for the hemoglobin–oxygen equilibrium discussed in Section 15.1, we might want to know the concentration of oxygenated hemoglobin present under certain oxygen concentrations within the lungs or muscles.

We can divide these types of problems into two categories: (1) finding equilibrium concentrations when we know the equilibrium constant and all but one of the equilibrium concentrations of the reactants and products, and (2) finding equilibrium concentrations when we know the equilibrium constant and only initial concentrations. The second category of problem is more difficult than the first. Let's examine each separately.

Finding Equilibrium Concentrations from the Equilibrium Constant and All but One of the Equilibrium Concentrations of the Reactants and Products

We can use the equilibrium constant to calculate the equilibrium concentration of one of the reactants or products, given the equilibrium concentrations of the others. To solve this type of problem, we follow our general problem-solving procedure as demonstrated in Example 15.8.

EXAMPLE 15.8

Finding Equilibrium Concentrations When You Know the Equilibrium Constant and All but One of the Equilibrium Concentrations of the Reactants and Products

Interactive
Worked Example
Video 15.8



Consider the following reaction:



In an equilibrium mixture, the concentration of COF_2 is 0.255 M and the concentration of CF_4 is 0.118 M. What is the equilibrium concentration of CO_2 ?

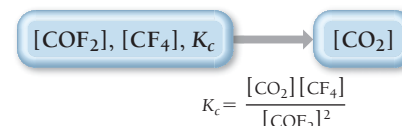
SORT You are given the equilibrium constant of a chemical reaction, together with the equilibrium concentrations of the reactant and one product. You are asked to find the equilibrium concentration of the other product.

GIVEN: $[\text{COF}_2] = 0.255 \text{ M}$
 $[\text{CF}_4] = 0.118 \text{ M}$
 $K_c = 2.00$

FIND: $[\text{CO}_2]$

STRATEGIZE You can calculate the concentration of the product using the given quantities and the expression for K_c .

CONCEPTUAL PLAN



SOLVE Solve the equilibrium expression for $[\text{CO}_2]$ and substitute in the appropriate values to calculate it.

SOLUTION

$$[\text{CO}_2] = K_c \frac{[\text{COF}_2]^2}{[\text{CF}_4]}$$

$$[\text{CO}_2] = 2.00 \left(\frac{(0.255)^2}{0.118} \right) = 1.10 \text{ M}$$

CHECK Check your answer by mentally substituting the given values of $[\text{COF}_2]$ and $[\text{CF}_4]$ as well as your calculated value for CO_2 back into the equilibrium expression.

$$K_c = \frac{[\text{CO}_2][\text{CF}_4]}{[\text{COF}_2]^2}$$

You found $[\text{CO}_2]$ to be roughly equal to 1. $[\text{COF}_2]^2 \approx 0.06$ and $[\text{CF}_4] \approx 0.12$. Therefore, K_c is approximately 2, as given in the problem.

FOR PRACTICE 15.8

Diatomic iodine $[\text{I}_2]$ decomposes at high temperature to form I atoms according to the reaction:



In an equilibrium mixture, the concentration of I_2 is 0.10 M. What is the equilibrium concentration of I?

Finding Equilibrium Concentrations from the Equilibrium Constant and Initial Concentrations or Pressures

More commonly, we know the equilibrium constant and only the initial concentrations of reactants, and we need to find the *equilibrium concentrations* of the reactants or products. These kinds of problems are generally more involved than those we just examined and require a specific procedure to solve them. The procedure has some similarities to the one used in Examples 15.5 and 15.6 in that we set up an ICE table showing the initial conditions, the changes, and the equilibrium conditions. However, unlike Examples 15.5 and 15.6, here the changes in concentration are not known and are represented with the variable x .

For example, consider again the simple reaction:



Suppose that, as before (see Section 15.6), we have a reaction mixture in which the initial concentration of A is 1.0 M and the initial concentration of B is 0.00 M. However, now we know the equilibrium constant, $K = 0.33$, and want to find the equilibrium concentrations. We know that since $Q = 0$, the reaction proceeds to the right (toward the products).

We set up the ICE table with the given initial concentrations and *represent the unknown change in [A] with the variable x* as follows:

	[A]	[B]
Initial	1.0	0.00
Change	$-x$	$+2x$
Equil	$1.0 - x$	$2x$

Represent changes from initial conditions with the variable x .

Notice that, due to the stoichiometry of the reaction, the change in $[\text{B}]$ must be $+2x$. As before, each *equilibrium* concentration is the sum of the two entries above it in the ICE table. To find the equilibrium concentrations of A and B, we must find the value of the variable x . Since we know the value of the equilibrium constant, we can use the equilibrium constant expression to set up an equation in which x is the only variable:

$$K_c = \frac{[\text{B}]^2}{[\text{A}]} = \frac{(2x)^2}{1.0 - x} = 0.33$$

or more simply:

$$\frac{4x^2}{1.0 - x} = 0.33$$

Interactive Worked
Example Video 15.9

This equation is a *quadratic* equation—it contains the variable x raised to the second power. In general, we can solve quadratic equations with the quadratic formula, which we introduce in Example 15.10. If the quadratic equation is a perfect square, however, we can solve it by simpler means, as shown in Example 15.9. For these examples, we give the general procedure in the left column and apply the procedure to the two different example problems in the center and right columns. Later in this section, we see that quadratic equations can often be simplified by making some approximations based on our chemical knowledge.

PROCEDURE FOR Finding Equilibrium Concentrations from Initial Concentrations and the Equilibrium Constant

To solve these types of problems, follow the given procedure.

1. Using the balanced equation as a guide, prepare a table showing the known initial concentrations of the reactants and products. Leave room in the table for the changes in concentrations and for the equilibrium concentrations.

2. Use the initial concentrations to calculate the reaction quotient (Q) for the initial concentrations. Compare Q to K to predict the direction in which the reaction will proceed.

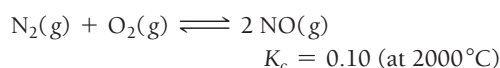
3. Represent the change in the concentration of one of the reactants or products with the variable x . Define the changes in the concentrations of the other reactants or products in terms of x . It is usually most convenient to let x represent the change in concentration of the reactant or product with the smallest stoichiometric coefficient.

4. Sum each column for each reactant and each product to determine the equilibrium concentrations in terms of the initial concentrations and the variable x .

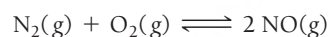
EXAMPLE 15.9

Finding Equilibrium Concentrations from Initial Concentrations and the Equilibrium Constant

Consider the reaction:



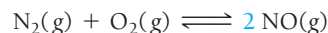
A reaction mixture at 2000°C initially contains $[\text{N}_2] = 0.200 \text{ M}$ and $[\text{O}_2] = 0.200 \text{ M}$. Find the equilibrium concentrations of the reactants and product at this temperature.



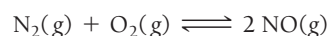
	$[\text{N}_2]$	$[\text{O}_2]$	$[\text{NO}]$
Initial	0.200	0.200	0.00
Change			
Equil			

$$Q_c = \frac{[\text{NO}]^2}{[\text{N}_2][\text{O}_2]} = \frac{(0.000)^2}{(0.200)(0.200)} = 0$$

$Q < K$; therefore, the reaction will proceed to the right.



	$[\text{N}_2]$	$[\text{O}_2]$	$[\text{NO}]$
Initial	0.200	0.200	0.00
Change	$-x$	$-x$	$+2x$
Equil			

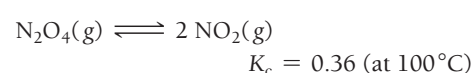


	$[\text{N}_2]$	$[\text{O}_2]$	$[\text{NO}]$
Initial	0.200	0.200	0.00
Change	$-x$	$-x$	$+2x$
Equil	$0.200 - x$	$0.200 - x$	$2x$

EXAMPLE 15.10

Finding Equilibrium Concentrations from Initial Concentrations and the Equilibrium Constant

Consider the reaction:



A reaction mixture at 100°C initially contains $[\text{NO}_2] = 0.100 \text{ M}$. Find the equilibrium concentrations of NO_2 and N_2O_4 at this temperature.



	$[\text{N}_2\text{O}_4]$	$[\text{NO}_2]$
Initial	0.00	0.100
Change		
Equil		

$$Q_c = \frac{[\text{NO}_2]^2}{[\text{N}_2\text{O}_4]} = \frac{(0.100)^2}{0.00} = \infty$$

$Q > K$; therefore, the reaction will proceed to the left.



	$[\text{N}_2\text{O}_4]$	$[\text{NO}_2]$
Initial	0.00	0.100
Change	$+x$	$-2x$
Equil		



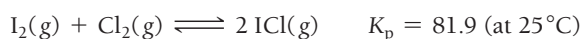
	$[\text{N}_2\text{O}_4]$	$[\text{NO}_2]$
Initial	0.00	0.100
Change	$+x$	$-2x$
Equil	x	$0.100 - 2x$

<p>5. Substitute the expressions for the equilibrium concentrations (from Step 4) into the expression for the equilibrium constant. Using the given value of the equilibrium constant, solve the expression for the variable x. In some cases, such as Example 15.9, you can take the square root of both sides of the expression to solve for x. In other cases, such as Example 15.10, you must solve a quadratic equation to find x.</p> <p>Remember the quadratic formula:</p> $ax^2 + bx + c = 0$ $x = \frac{-b \pm \sqrt{b^2 - 4ac}}{2a}$	$K_c = \frac{[\text{NO}]^2}{[\text{N}_2][\text{O}_2]}$ $= \frac{(2x)^2}{(0.200 - x)(0.200 - x)}$ $0.10 = \frac{(2x)^2}{(0.200 - x)^2}$ $\sqrt{0.10} = \frac{2x}{0.200 - x}$ $\sqrt{0.10}(0.200 - x) = 2x$ $\sqrt{0.10}(0.200) - \sqrt{0.10}x = 2x$ $0.063 = 2x + \sqrt{0.10}x$ $0.063 = 2.3x$ $x = 0.027$	$K_c = \frac{[\text{NO}_2]^2}{[\text{N}_2\text{O}_4]}$ $= \frac{(0.100 - 2x)^2}{x}$ $0.36 = \frac{0.0100 - 0.400x + 4x^2}{x}$ $0.36x = 0.0100 - 0.400x + 4x^2$ $4x^2 - 0.76x + 0.0100 = 0 \text{ (quadratic)}$ $x = \frac{-b \pm \sqrt{b^2 - 4ac}}{2a}$ $= \frac{-(-0.76) \pm \sqrt{(-0.76)^2 - 4(4)(0.0100)}}{2(4)}$ $= \frac{0.76 \pm 0.65}{8}$ $x = 0.176 \text{ or } x = 0.014$
<p>6. Substitute x into the expressions for the equilibrium concentrations of the reactants and products (from Step 4) and calculate the concentrations. In cases where you solved a quadratic and have two values for x, choose the value for x that gives a physically realistic answer. For example, reject the value of x that results in any negative concentrations.</p>	$[\text{NO}_2] = 0.200 - 0.027$ $= 0.172 \text{ M}$ $[\text{O}_2] = 0.200 - 0.027$ $= 0.173 \text{ M}$ $[\text{NO}] = 2(0.027)$ $= 0.054 \text{ M}$	<p>We reject the root $x = 0.176$ because it gives a negative concentration for NO_2. Using $x = 0.014$, we get the following concentrations:</p> $[\text{NO}_2] = 0.100 - 2x$ $= 0.100 - 2(0.014)$ $= 0.072 \text{ M}$ $[\text{N}_2\text{O}_4] = x$ $= 0.014 \text{ M}$
<p>7. Check your answer by substituting the calculated equilibrium values into the equilibrium expression. The calculated value of K should match the given value of K. Note that rounding errors could cause a difference in the least significant digit when comparing values of the equilibrium constant.</p>	$K_c = \frac{[\text{NO}]^2}{[\text{N}_2][\text{O}_2]}$ $= \frac{(0.054)^2}{(0.173)(0.173)} = 0.097$ <p>Since the calculated value of K_c matches the given value (to within one digit in the least significant figure), the answer is valid.</p>	$K_c = \frac{[\text{NO}_2]^2}{[\text{N}_2\text{O}_4]}$ $= \frac{(0.072)^2}{0.014} = 0.37$ <p>Since the calculated value of K_c matches the given value (to within one digit in the least significant figure), the answer is valid.</p>
	<p>FOR PRACTICE 15.9</p> <p>The reaction in Example 15.9 is carried out at a different temperature at which $K_c = 0.055$. This time the reaction mixture starts with only the product, $[\text{NO}] = 0.0100 \text{ M}$, and no reactants. Find the equilibrium concentrations of N_2, O_2, and NO at equilibrium.</p>	<p>FOR PRACTICE 15.10</p> <p>The reaction in Example 15.10 is carried out at the same temperature, but this time the reaction mixture initially contains only the reactant, $[\text{N}_2\text{O}_4] = 0.0250 \text{ M}$, and no NO_2. Find the equilibrium concentrations of N_2O_4 and NO_2.</p>

When the initial conditions are given in terms of partial pressures (instead of concentrations) and the equilibrium constant is given as K_p instead of K_c , use the same procedure, but substitute partial pressures for concentrations, as shown in Example 15.11.

EXAMPLE 15.11**Finding Equilibrium Partial Pressures When You Are Given the Equilibrium Constant and Initial Partial Pressures**

Consider the reaction:



A reaction mixture at 25°C initially contains $P_{\text{I}_2} = 0.100 \text{ atm}$, $P_{\text{Cl}_2} = 0.100 \text{ atm}$, and $P_{\text{ICl}} = 0.100 \text{ atm}$. Find the equilibrium partial pressures of I_2 , Cl_2 , and ICl at this temperature.

SOLUTION

Follow the procedure used in Examples 15.5 and 15.6 (using partial pressures in place of concentrations) to solve the problem.

1. Using the balanced equation as a guide, prepare a table showing the known initial partial pressures of the reactants and products.

$$\text{I}_2(\text{g}) + \text{Cl}_2(\text{g}) \rightleftharpoons 2 \text{ICl}(\text{g})$$

	$P_{\text{I}_2}(\text{atm})$	$P_{\text{Cl}_2}(\text{atm})$	$P_{\text{ICl}}(\text{atm})$
Initial	0.100	0.100	0.100
Change			
Equil			

2. Use the initial partial pressures to calculate the reaction quotient (Q). Compare Q to K to predict the direction in which the reaction will proceed.

$$Q_p = \frac{(P_{\text{ICl}})^2}{P_{\text{I}_2}P_{\text{Cl}_2}} = \frac{(0.100)^2}{(0.100)(0.100)} = 1$$

$$K_p = 81.9 \text{ (given)}$$

$$Q < K; \text{ therefore, the reaction will proceed to the right.}$$

3. Represent the change in the partial pressure of one of the reactants or products with the variable x . Define the changes in the partial pressures of the other reactants or products in terms of x .

$$\text{I}_2(\text{g}) + \text{Cl}_2(\text{g}) \rightleftharpoons 2 \text{ICl}(\text{g})$$

	$P_{\text{I}_2}(\text{atm})$	$P_{\text{Cl}_2}(\text{atm})$	$P_{\text{ICl}}(\text{atm})$
Initial	0.100	0.100	0.100
Change	$-x$	$-x$	$+2x$
Equil			

4. Sum each column for each reactant and product to determine the equilibrium partial pressures in terms of the initial partial pressures and the variable x .

$$\text{I}_2(\text{g}) + \text{Cl}_2(\text{g}) \rightleftharpoons 2 \text{ICl}(\text{g})$$

	$P_{\text{I}_2}(\text{atm})$	$P_{\text{Cl}_2}(\text{atm})$	$P_{\text{ICl}}(\text{atm})$
Initial	0.100	0.100	0.100
Change	$-x$	$-x$	$+2x$
Equil	$0.100 - x$	$0.100 - x$	$0.100 + 2x$

5. Substitute the expressions for the equilibrium partial pressures (from Step 4) into the expression for the equilibrium constant. Use the given value of the equilibrium constant to solve the expression for the variable x .

$$K_p = \frac{(P_{\text{ICl}})^2}{P_{\text{I}_2}P_{\text{Cl}_2}} = \frac{(0.100 + 2x)^2}{(0.100 - x)(0.100 - x)}$$

$$81.9 = \frac{(0.100 + 2x)^2}{(0.100 - x)^2} \quad (\text{perfect square})$$

$$\sqrt{81.9} = \frac{(0.100 + 2x)}{(0.100 - x)}$$

$$\sqrt{81.9}(0.100 - x) = 0.100 + 2x$$

$$\sqrt{81.9}(0.100) - \sqrt{81.9}x = 0.100 + 2x$$

$$\sqrt{81.9}(0.100) - 0.100 = 2x + \sqrt{81.9}x$$

$$0.805 = 11.05x$$

$$x = 0.0729$$

6. Substitute x into the expressions for the equilibrium partial pressures of the reactants and products (from Step 4) and calculate the partial pressures.	$P_{I_2} = 0.100 - 0.0729 = 0.027 \text{ atm}$ $P_{Cl_2} = 0.100 - 0.0729 = 0.027 \text{ atm}$ $P_{ICl} = 0.100 + 2(0.0729) = 0.246 \text{ atm}$
7. Check your answer by substituting the calculated equilibrium partial pressures into the equilibrium expression. The calculated value of K should match the given value of K .	$K_p = \frac{(P_{ICl})^2}{P_{I_2}P_{Cl_2}} = \frac{(0.246)^2}{(0.027)(0.027)} = 83$ Since the calculated value of K_p matches the given value (within the uncertainty indicated by the significant figures), the answer is valid.

FOR PRACTICE 15.11

The reaction between I_2 and Cl_2 in Example 15.11 is carried out at the same temperature, but with these initial partial pressures: $P_{I_2} = 0.150 \text{ atm}$, $P_{Cl_2} = 0.150 \text{ atm}$, $P_{ICl} = 0.00 \text{ atm}$. Find the equilibrium partial pressures of all three substances.

Simplifying Approximations in Working Equilibrium Problems

For some equilibrium problems of the type shown in Examples 15.9, 15.10, and 15.11, we can make an approximation that simplifies the calculations without any significant loss of accuracy. For example, if the equilibrium constant is relatively small, the reaction will not proceed very far to the right. Therefore, if the initial reactant concentration is relatively large, we can make the assumption that x is small relative to the initial concentration of reactant.

To see how this approximation works, consider again the simple reaction $A \rightleftharpoons 2 B$. Suppose that, as before, we have a reaction mixture in which the initial concentration of A is 1.0 M and the initial concentration of B is 0.0 M and that we want to find the equilibrium concentrations. However, suppose that in this case the equilibrium constant is much smaller, say $K_c = 3.3 \times 10^{-5}$. The ICE table is identical to the one we set up previously:

	[A]	[B]
Initial	1.0	0.0
Change	$-x$	$+2x$
Equil	$1.0 - x$	$2x$

Except for the value of K_c , we end up with the exact quadratic equation that we had before:

$$K_c = \frac{[B]^2}{[A]} = \frac{(2x)^2}{1.0 - x} = 3.3 \times 10^{-5}$$

or more simply:

$$\frac{4x^2}{1.0 - x} = 3.3 \times 10^{-5}$$

We can rearrange this quadratic equation into standard form and solve it using the quadratic formula. But because K_c is small, the reaction will not proceed very far toward products and, therefore, x will also be small. If x is much smaller than 1.0 , then $1.0 - x$ (the quantity in the denominator) can be approximated by 1.0 :

$$\frac{4x^2}{1.0 - x} = 3.3 \times 10^{-5}$$

This approximation greatly simplifies the equation, which we can then solve for x as follows:

$$\begin{aligned} \frac{4x^2}{1.0} &= 3.3 \times 10^{-5} \\ 4x^2 &= 3.3 \times 10^{-5} \\ x &= \sqrt{\frac{3.3 \times 10^{-5}}{4}} = 0.0029 \end{aligned}$$

We can check the validity of this approximation by comparing the calculated value of x to the number from which it was subtracted. The ratio of x to the number it is subtracted from should be less than 0.05 (or 5%) for the approximation to be valid. In this case, x was subtracted from 1.0, and therefore we can calculate the ratio of the value of x to 1.0 as follows:

$$\frac{0.0029}{1.0} \times 100\% = 0.29\%$$

The approximation is less than 0.05 (or 5%) and is therefore valid.

In Examples 15.12 and 15.13, we treat two nearly identical problems—the only difference is the initial concentration of the reactant. In Example 15.12, the initial concentration of the reactant is relatively large, the equilibrium constant is small, and the x is *small* approximation works well. In Example 15.13, however, the initial concentration of the reactant is much smaller, and even though the equilibrium constant is the same, the x is *small* approximation does not work (because the initial concentration is also small). In cases such as this, we have a couple of options to solve the problem. We can either solve the equation exactly or use the *method of successive approximations*, which is introduced in Example 15.13. In this method, we essentially solve for x as if it were small, and then substitute the value obtained back into the equation (where x was initially neglected) to solve for x again. This can be repeated until the calculated value of x stops changing with each iteration, an indication that we have arrived at an acceptable value for x .

Note that the x is *small* approximation does not imply that x is *zero*. If that were the case, the reactant and product concentrations would not change from their initial values. The x is *small* approximation just means that when x is added or subtracted to another number, it does not change that number by very much.

For example, we can calculate the value of the difference $1.0 - x$ when $x = 3.0 \times 10^{-4}$:

$$1.0 - x = 1.0 - 3.0 \times 10^{-4} = 0.9997 = 1.0$$

Since the value of 1.0 is known only to two significant figures, subtracting the small x does not change the value at all. This situation is similar to weighing yourself on a bathroom scale with and without a penny in your pocket. Unless your scale is unusually precise, removing the penny from your pocket does not change the reading on the scale. This does not imply that the penny is weightless, only that its weight is small compared to your body weight. You can neglect the weight of the penny in reading your weight with no detectable loss in accuracy.

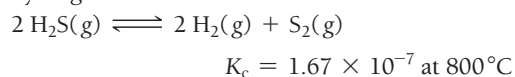
Interactive Worked
Example Video 15.12



EXAMPLE 15.12

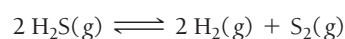
Finding Equilibrium Concentrations from Initial Concentrations in Cases with a Small Equilibrium Constant

Consider the reaction for the decomposition of hydrogen disulfide:



A 0.500-L reaction vessel initially contains 0.0125 mol of H_2S at 800°C . Find the equilibrium concentrations of H_2 and S_2 .

$$[\text{H}_2\text{S}] = \frac{0.0125 \text{ mol}}{0.500 \text{ L}} = 0.0250 \text{ M}$$

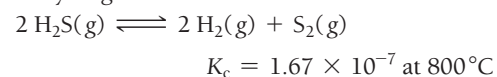


	$[\text{H}_2\text{S}]$	$[\text{H}_2]$	$[\text{S}_2]$
Initial	0.0250	0.00	0.00
Change			
Equil			

EXAMPLE 15.13

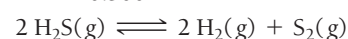
Finding Equilibrium Concentrations from Initial Concentrations in Cases with a Small Equilibrium Constant

Consider the reaction for the decomposition of hydrogen disulfide:



A 0.500-L reaction vessel initially contains 1.25×10^{-4} of H_2S at 800°C . Find the equilibrium concentrations of H_2 and S_2 .

$$[\text{H}_2\text{S}] = \frac{1.25 \times 10^{-4} \text{ mol}}{0.500 \text{ L}} = 2.50 \times 10^{-4} \text{ M}$$



	$[\text{H}_2\text{S}]$	$[\text{H}_2]$	$[\text{S}_2]$
Initial	2.50×10^{-4}	0.00	0.00
Change			
Equil			

PROCEDURE FOR Finding Equilibrium Concentrations from Initial Concentrations in Cases with a Small Equilibrium Constant

To solve these types of problems, follow the given procedure.


- Using the balanced equation as a guide, prepare a table showing the known initial concentrations of the reactants and products. (In these examples, you must first calculate the concentration of H_2S from the given number of moles and volume.)

2. Use the initial concentrations to calculate the reaction quotient (Q). Compare Q to K to predict the direction in which the reaction will proceed.	By inspection, $Q_c = 0$; the reaction will proceed to the right.	By inspection, $Q_c = 0$; the reaction will proceed to the right.																																
3. Represent the change in the concentration of one of the reactants or products with the variable x . Define the changes in the concentrations of the other reactants or products with respect to x .	$2 \text{H}_2\text{S}(\text{g}) \rightleftharpoons 2 \text{H}_2(\text{g}) + \text{S}_2(\text{g})$ <table><tr><th></th><th>$[\text{H}_2\text{S}]$</th><th>$[\text{H}_2]$</th><th>$[\text{S}_2]$</th></tr><tr><td>Initial</td><td>0.0250</td><td>0.00</td><td>0.00</td></tr><tr><td>Change</td><td>$-2x$</td><td>$+2x$</td><td>$+x$</td></tr><tr><td>Equil</td><td></td><td></td><td></td></tr></table>		$[\text{H}_2\text{S}]$	$[\text{H}_2]$	$[\text{S}_2]$	Initial	0.0250	0.00	0.00	Change	$-2x$	$+2x$	$+x$	Equil				$2 \text{H}_2\text{S}(\text{g}) \rightleftharpoons 2 \text{H}_2(\text{g}) + \text{S}_2(\text{g})$ <table><tr><th></th><th>$[\text{H}_2\text{S}]$</th><th>$[\text{H}_2]$</th><th>$[\text{S}_2]$</th></tr><tr><td>Initial</td><td>2.50×10^{-4}</td><td>0.00</td><td>0.00</td></tr><tr><td>Change</td><td>$-2x$</td><td>$+2x$</td><td>$+x$</td></tr><tr><td>Equil</td><td></td><td></td><td></td></tr></table>		$[\text{H}_2\text{S}]$	$[\text{H}_2]$	$[\text{S}_2]$	Initial	2.50×10^{-4}	0.00	0.00	Change	$-2x$	$+2x$	$+x$	Equil			
	$[\text{H}_2\text{S}]$	$[\text{H}_2]$	$[\text{S}_2]$																															
Initial	0.0250	0.00	0.00																															
Change	$-2x$	$+2x$	$+x$																															
Equil																																		
	$[\text{H}_2\text{S}]$	$[\text{H}_2]$	$[\text{S}_2]$																															
Initial	2.50×10^{-4}	0.00	0.00																															
Change	$-2x$	$+2x$	$+x$																															
Equil																																		
4. Sum each column for each reactant and product to determine the equilibrium concentrations in terms of the initial concentrations and the variable x .	$2 \text{H}_2\text{S}(\text{g}) \rightleftharpoons 2 \text{H}_2(\text{g}) + \text{S}_2(\text{g})$ <table><tr><th></th><th>$[\text{H}_2\text{S}]$</th><th>$[\text{H}_2]$</th><th>$[\text{S}_2]$</th></tr><tr><td>Initial</td><td>0.0250</td><td>0.00</td><td>0.00</td></tr><tr><td>Change</td><td>$-2x$</td><td>$+2x$</td><td>$+x$</td></tr><tr><td>Equil</td><td>$0.0250 - 2x$</td><td>$2x$</td><td>x</td></tr></table>		$[\text{H}_2\text{S}]$	$[\text{H}_2]$	$[\text{S}_2]$	Initial	0.0250	0.00	0.00	Change	$-2x$	$+2x$	$+x$	Equil	$0.0250 - 2x$	$2x$	x	$2 \text{H}_2\text{S}(\text{g}) \rightleftharpoons 2 \text{H}_2(\text{g}) + \text{S}_2(\text{g})$ <table><tr><th></th><th>$[\text{H}_2\text{S}]$</th><th>$[\text{H}_2]$</th><th>$[\text{S}_2]$</th></tr><tr><td>Initial</td><td>2.50×10^{-4}</td><td>0.00</td><td>0.00</td></tr><tr><td>Change</td><td>$-2x$</td><td>$+2x$</td><td>$+x$</td></tr><tr><td>Equil</td><td>$2.50 \times 10^{-4} - 2x$</td><td>$2x$</td><td>x</td></tr></table>		$[\text{H}_2\text{S}]$	$[\text{H}_2]$	$[\text{S}_2]$	Initial	2.50×10^{-4}	0.00	0.00	Change	$-2x$	$+2x$	$+x$	Equil	$2.50 \times 10^{-4} - 2x$	$2x$	x
	$[\text{H}_2\text{S}]$	$[\text{H}_2]$	$[\text{S}_2]$																															
Initial	0.0250	0.00	0.00																															
Change	$-2x$	$+2x$	$+x$																															
Equil	$0.0250 - 2x$	$2x$	x																															
	$[\text{H}_2\text{S}]$	$[\text{H}_2]$	$[\text{S}_2]$																															
Initial	2.50×10^{-4}	0.00	0.00																															
Change	$-2x$	$+2x$	$+x$																															
Equil	$2.50 \times 10^{-4} - 2x$	$2x$	x																															
5. Substitute the expressions for the equilibrium concentrations (from Step 4) into the expression for the equilibrium constant. Use the given value of the equilibrium constant to solve the resulting equation for the variable x . In this case, the resulting equation is cubic in x . Although cubic equations can be solved, the solutions are not usually simple. However, since the equilibrium constant is small, you know that the reaction does not proceed very far to the right. Therefore, x will be a small number and can be dropped from any quantities in which it is added to or subtracted from another number (as long as the number itself is not too small). Check whether your approximation was valid by comparing the calculated value of x to the number it was added to or subtracted from. The ratio of the two numbers should be less than 0.05 (or 5%) for the approximation to be valid. If the approximation is not valid, proceed to Step 5a.	$K_c = \frac{[\text{H}_2]^2[\text{S}_2]}{[\text{H}_2\text{S}]^2}$ $= \frac{(2x)^2x}{(0.0250 - 2x)^2}$ $1.67 \times 10^{-7} = \frac{4x^3}{(0.0250 - 2x)^2}$ $1.67 \times 10^{-7} = \frac{4x^3}{(0.0250 - \cancel{2x})^2} \quad \text{\textit{x is small.}}$ $1.67 \times 10^{-7} = \frac{4x^3}{6.25 \times 10^{-4}}$ $6.25 \times 10^{-4}(1.67 \times 10^{-7}) = 4x^3$ $x^3 = \frac{6.25 \times 10^{-4}(1.67 \times 10^{-7})}{4}$ $x = 2.97 \times 10^{-4}$ Checking the x is <i>small</i> approximation: $\frac{2.97 \times 10^{-4}}{0.0250} \times 100\% = 1.19\%$ The x is <i>small</i> approximation is valid. Proceed to Step 6.	$K_c = \frac{[\text{H}_2]^2[\text{S}_2]}{[\text{H}_2\text{S}]^2}$ $= \frac{(2x)^2x}{(2.50 \times 10^{-4} - 2x)^2}$ $1.67 \times 10^{-7} = \frac{4x^3}{(2.50 \times 10^{-4} - 2x)^2}$ $1.67 \times 10^{-7} = \frac{4x^3}{(2.50 \times 10^{-4} - \cancel{2x})^2} \quad \text{\textit{x is small.}}$ $1.67 \times 10^{-7} = \frac{4x^3}{6.25 \times 10^{-8}}$ $6.25 \times 10^{-8}(1.67 \times 10^{-7}) = 4x^3$ $x^3 = \frac{6.25 \times 10^{-8}(1.67 \times 10^{-7})}{4}$ $x = 1.38 \times 10^{-5}$ Checking the x is <i>small</i> approximation: $\frac{1.38 \times 10^{-5}}{2.50 \times 10^{-4}} \times 100\% = 5.52\%$ The approximation does not satisfy the $<5\%$ rule (although it is close).																																

—Continued on the next page

Continued from the previous page—

<p>5a. If the approximation is not valid, you can either solve the equation exactly (by hand or with your calculator) or use the method of successive approximations. In Example 15.13, use the method of successive approximations.</p> <p>Substitute the value obtained for x in Step 5 back into the original cubic equation, but only at the exact spot where x was assumed to be negligible, and then solve the equation for x again. Continue this procedure until the value of x obtained from solving the equation is the same as the one that is substituted into the equation.</p>		$1.67 \times 10^{-7} = \frac{4x^3}{(2.50 \times 10^{-4} - 2x)^2}$ $x = 1.38 \times 10^{-5}$ $1.67 \times 10^{-7} = \frac{4x^3}{(2.50 \times 10^{-4} - 2.76 \times 10^{-5})^2}$ $x = 1.27 \times 10^{-5}$ <p>If you substitute this value of x back into the cubic equation and solve it, you get $x = 1.28 \times 10^{-5}$, which is nearly identical to 1.27×10^{-5}. Therefore, you have arrived at the best approximation for x.</p>
<p>6. Substitute x into the expressions for the equilibrium concentrations of the reactants and products (from Step 4) and calculate the concentrations.</p>	$[\text{H}_2\text{S}] = 0.0250 - (2.97 \times 10^{-4}) = 0.0244 \text{ M}$ $[\text{H}_2] = 2(2.97 \times 10^{-4}) = 5.94 \times 10^{-4} \text{ M}$ $[\text{S}_2] = 2.97 \times 10^{-4} \text{ M}$	$[\text{H}_2\text{S}] = 2.50 \times 10^{-4} - 2(1.28 \times 10^{-5}) = 2.24 \times 10^{-4} \text{ M}$ $[\text{H}_2] = 2(1.28 \times 10^{-5}) = 2.56 \times 10^{-5} \text{ M}$ $[\text{S}_2] = 1.28 \times 10^{-5} \text{ M}$
<p>7. Check your answer by substituting the calculated equilibrium values into the equilibrium expression. The calculated value of K should match the given value of K. Note that the approximation method and rounding errors could cause a difference of up to about 5% when comparing values of the equilibrium constant.</p>	$K_c = \frac{(5.94 \times 10^{-4})^2(2.97 \times 10^{-4})}{(0.0244)^2} = 1.76 \times 10^{-7}$ <p>The calculated value of K is close enough to the given value when you consider the uncertainty introduced by the approximation. Therefore, the answer is valid.</p>	$K_c = \frac{(2.56 \times 10^{-5})^2(1.28 \times 10^{-5})}{(2.24 \times 10^{-4})^2} = 1.67 \times 10^{-7}$ <p>The calculated value of K is equal to the given value. Therefore, the answer is valid.</p>
	<p>FOR PRACTICE 15.12</p> <p>The reaction in Example 15.12 is carried out at the same temperature with the following initial concentrations: $[\text{H}_2\text{S}] = 0.100 \text{ M}$, $[\text{H}_2] = 0.100 \text{ M}$, and $[\text{S}_2] = 0.000 \text{ M}$. Find the equilibrium concentration of $[\text{S}_2]$.</p>	<p>FOR PRACTICE 15.13</p> <p>The reaction in Example 15.13 is carried out at the same temperature with the following initial concentrations: $[\text{H}_2\text{S}] = 1.00 \times 10^{-4} \text{ M}$, $[\text{H}_2] = 0.00 \text{ M}$, and $[\text{S}_2] = 0.000 \text{ M}$. Find the equilibrium concentration of $[\text{S}_2]$.</p>



Conceptual Connection

The x is small Approximation

For the generic reaction, $\text{A}(\text{g}) \rightleftharpoons \text{B}(\text{g})$, consider each value of K and initial concentration of A. For which set will the x is small approximation most likely apply?

- (a) $K = 1.0 \times 10^{-5}$; $[\text{A}] = 0.250 \text{ M}$ (b) $K = 1.0 \times 10^{-2}$; $[\text{A}] = 0.250 \text{ M}$
 (c) $K = 1.0 \times 10^{-5}$; $[\text{A}] = 0.00250 \text{ M}$ (d) $K = 1.0 \times 10^{-2}$; $[\text{A}] = 0.00250 \text{ M}$

15.9 Le Châtelier's Principle: How a System at Equilibrium Responds to Disturbances



KEY CONCEPT VIDEO
Le Châtelier's Principle

We have seen that a chemical system not in equilibrium tends to progress toward equilibrium and that the relative concentrations of the reactants and products at equilibrium are characterized by the equilibrium constant, K . What happens, however, when a chemical system already at equilibrium is disturbed?

Le Châtelier's principle states that the chemical system responds to minimize the disturbance.

Le Châtelier's principle: When a chemical system at equilibrium is disturbed, the system shifts in a direction that minimizes the disturbance.

In other words, a system at equilibrium tends to maintain that equilibrium—it bounces back when disturbed.

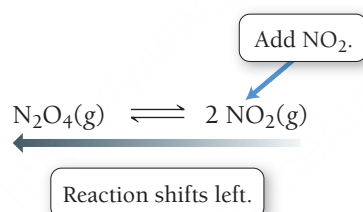
Le Châtelier is pronounced
"Le-sha-te-lyay."

The Effect of a Concentration Change on Equilibrium

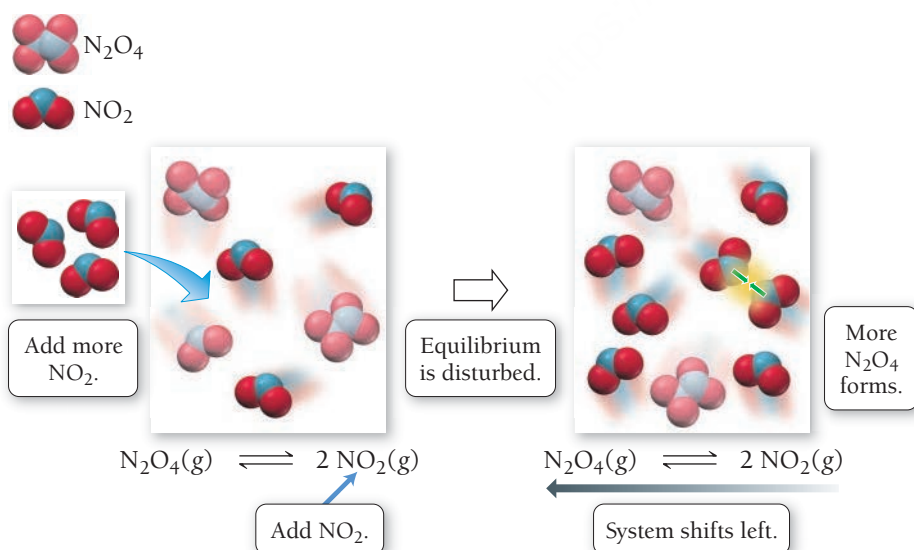
Consider the following reaction in chemical equilibrium:



Suppose we disturb the equilibrium by adding NO_2 to the equilibrium mixture (**Figure 15.7 ▼**). In other words, we increase the concentration of NO_2 , the product. What happens? According to Le Châtelier's principle, the system shifts in a direction to minimize the disturbance. The reaction goes to the left (it proceeds in the reverse direction), consuming some of the added NO_2 and thus bringing its concentration back down, as shown graphically in **Figure 15.8(a) ►** on the next page.



Le Châtelier's Principle: Changing Concentration



◀ **FIGURE 15.7 Le Châtelier's Principle: The Effect of a Concentration Change** Adding NO_2 causes the reaction to shift left, consuming some of the added NO_2 and forming more N_2O_4 .

The reaction shifts to the left because the value of Q increases when we add a product to the reaction mixture. For example, suppose we double the concentration of NO_2 .

- Before doubling the concentration of NO_2 : $Q_1 = K = \frac{[\text{NO}_2]^2}{[\text{N}_2\text{O}_4]}$

- Immediately after doubling the concentration of NO_2 :

$$Q_2 = \frac{(2[\text{NO}_2])^2}{[\text{N}_2\text{O}_4]} = 4 \times \frac{[\text{NO}_2]^2}{[\text{N}_2\text{O}_4]} = 4 \times Q_1 > K.$$

- Since $Q > K$, the reaction shifts to left to reestablish equilibrium.

What happens, however, if we add extra N_2O_4 (the reactant), increasing its concentration? In this case, the reaction shifts to the right, consuming some of the added N_2O_4 and bringing its concentration back down, as shown graphically in **Figure 15.8(b)** ▼.

Add N_2O_4 .



Reaction shifts right.

The reaction shifts to the right in this case because the value of Q changes. For example, suppose we double the concentration of N_2O_4 :

- Before doubling the concentration of N_2O_4 : $Q_1 = K = \frac{[\text{NO}_2]^2}{[\text{N}_2\text{O}_4]}$

- Immediately after doubling the concentration of N_2O_4 :

$$Q_2 = \frac{[\text{NO}_2]^2}{2[\text{N}_2\text{O}_4]} = \frac{1}{2} \times \frac{[\text{NO}_2]^2}{[\text{N}_2\text{O}_4]} = \frac{1}{2} \times Q_1 < K.$$

- Since $Q < K$, the reaction shifts to the right to reestablish equilibrium.

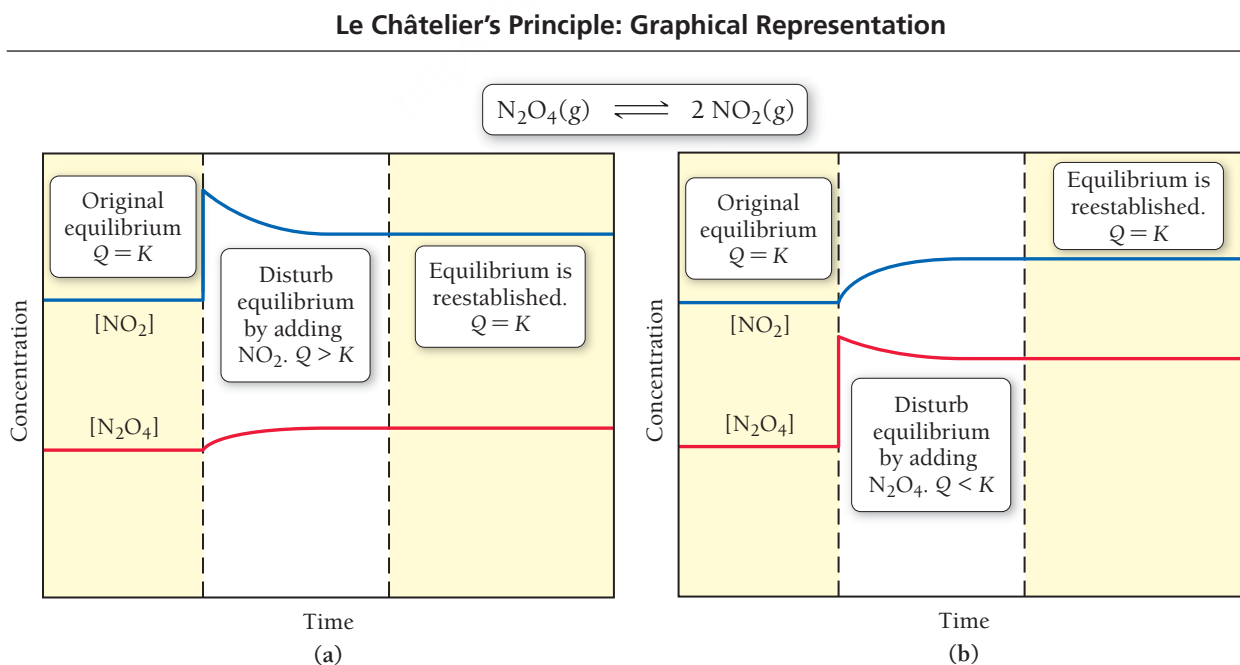
In both of these cases, the system shifts in a direction that minimizes the disturbance. Lowering the concentration of a reactant (which makes $Q > K$) causes the system to shift in the direction of the reactants to minimize the disturbance. Lowering the concentration of a product (which makes $Q < K$) causes the system to shift in the direction of products.

► FIGURE 15.8

Le Châtelier's

Principle: Changing Concentration

These two graphs each show the concentrations of NO_2 and N_2O_4 for the reaction $\text{N}_2\text{O}_4(\text{g}) \rightleftharpoons 2 \text{NO}_2(\text{g})$ as a function of time in three distinct stages of the reaction: initially at equilibrium (left), upon disturbance of the equilibrium by addition of more NO_2 (a) or N_2O_4 (b) to the reaction mixture (center), and upon reestablishment of equilibrium (right).



Summarizing the Effect of a Concentration Change on Equilibrium:

If a chemical system is at equilibrium:

- Increasing the concentration of one or more of the *reactants* (which makes $Q < K$) causes the reaction to *shift to the right* (in the direction of the products).
- Increasing the concentration of one or more of the *products* (which makes $Q > K$) causes the reaction to *shift to the left* (in the direction of the reactants).
- Decreasing the concentration of one or more of the *reactants* (which makes $Q > K$) causes the reaction to *shift to the left* (in the direction of the reactants).
- Decreasing the concentration of one or more of the *products* (which makes $Q < K$) causes the reaction to *shift to the right* (in the direction of the products).

EXAMPLE 15.14

The Effect of a Concentration Change on Equilibrium

Interactive
Worked Example
Video 15.14



Consider the following reaction at equilibrium:



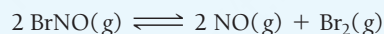
What is the effect of adding CO_2 to the reaction mixture? What is the effect of adding CaCO_3 ?

SOLUTION

Adding CO_2 increases the concentration of CO_2 and causes the reaction to shift to the left. Adding additional CaCO_3 , however, does not increase the concentration of CaCO_3 because CaCO_3 is a solid and therefore has a constant concentration. Thus, adding CaCO_3 has no effect on the position of the equilibrium. (Note that, as we saw in Section 15.5, solids are not included in the equilibrium expression.)

FOR PRACTICE 15.14

Consider the following reaction in chemical equilibrium:

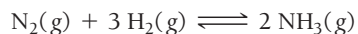


What is the effect of adding Br_2 to the reaction mixture? What is the effect of adding BrNO ?

The Effect of a Volume (or Pressure) Change on Equilibrium

How does a system in chemical equilibrium respond to a volume change? Recall from Chapter 10 that changing the volume of a gas (or a gas mixture) results in a change in pressure. Remember also that pressure and volume are inversely related: A *decrease* in volume causes an *increase* in pressure, and an *increase* in volume causes a *decrease* in pressure. So, if the volume of a reaction mixture at chemical equilibrium is changed, the pressure changes and the system shifts in a direction to minimize that change.

For example, consider the following reaction at equilibrium in a cylinder equipped with a moveable piston:

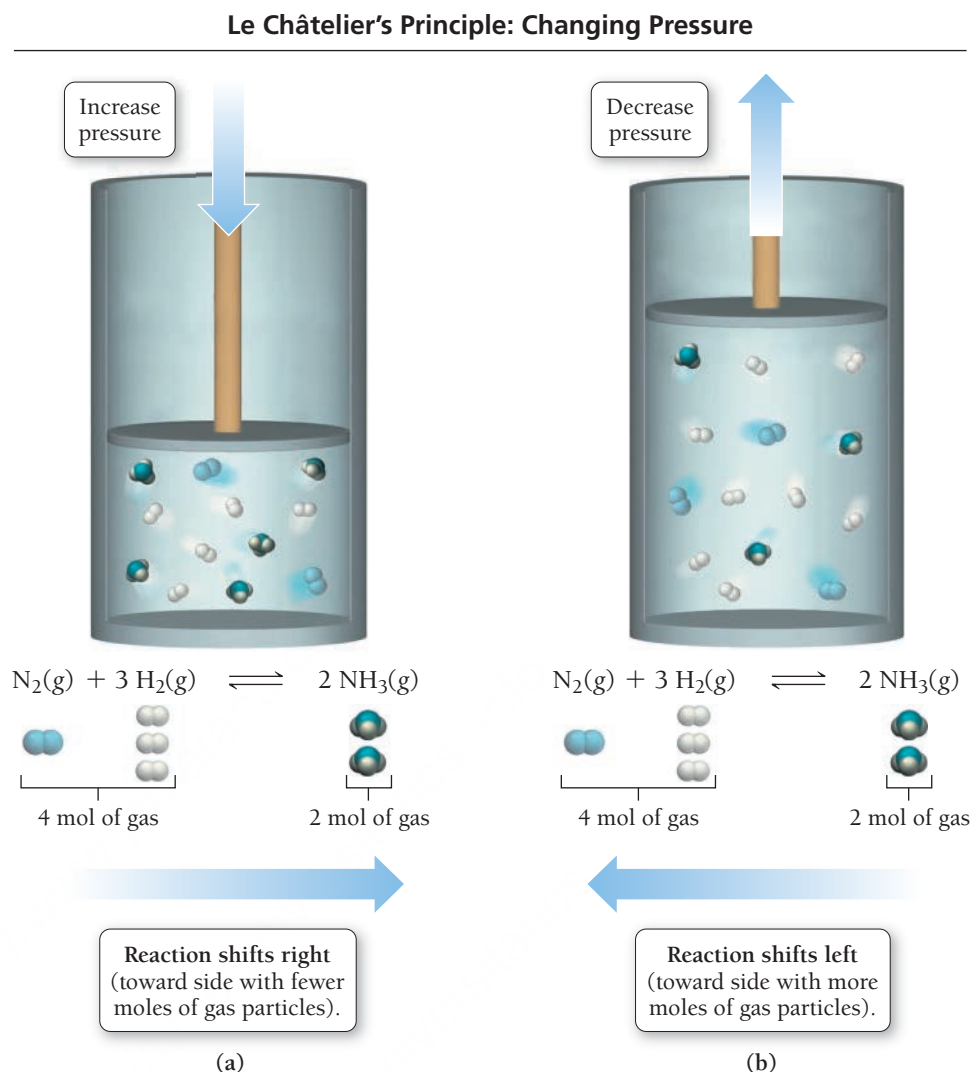


What happens if we push down on the piston, lowering the volume and raising the pressure (**Figure 15.9** ► on the next page)? How can the chemical system respond to bring the pressure back down? Look carefully at the reaction coefficients. If the reaction shifts to the right, 4 mol of gas particles are converted to 2 mol of gas particles. From the ideal gas law ($PV = nRT$), we know that decreasing the number of moles of a gas (n) results in a lower pressure (P). Therefore, the system shifts to the right, decreasing the number of gas molecules and bringing the pressure back down, minimizing the disturbance.

A change in volume, like a change in concentration, generally changes the value of Q (with some exceptions, which we discuss later in this section of the chapter). For example, suppose we decrease the

In considering the effect of a change in volume, we assume that the change in volume is carried out at constant temperature.

▲ FIGURE 15.9 Le Châtelier's Principle: The Effect of a Pressure Change (a) Decreasing the volume increases the pressure, causing the reaction to shift to the right (fewer moles of gas, lower pressure). (b) Increasing the volume reduces the pressure, causing the reaction to shift to the left (more moles of gas, higher pressure).



volume of a nitrogen, hydrogen, and ammonia equilibrium mixture to $\frac{1}{2}$ of its original volume. We observe the following:

We can express the concentration of any substance as the number of moles of the substance divided by the volume: $[A] = n_a/V$.

- Before halving the volume: $Q_1 = K = \frac{[\text{NH}_3]^2}{[\text{N}_2][\text{H}_2]^3} = \frac{\left(\frac{n_{\text{NH}_3}}{V}\right)^2}{\left(\frac{n_{\text{N}_2}}{V}\right)\left(\frac{n_{\text{H}_2}}{V}\right)^3}$
- Immediately after halving the volume:

$$Q_2 = \frac{\left(\frac{n_{\text{NH}_3}}{\frac{1}{2}V}\right)^2}{\left(\frac{n_{\text{N}_2}}{\frac{1}{2}V}\right)\left(\frac{n_{\text{H}_2}}{\frac{1}{2}V}\right)^3} = \frac{4\left(\frac{n_{\text{NH}_3}}{V}\right)^2}{2\left(\frac{n_{\text{N}_2}}{V}\right)8\left(\frac{n_{\text{H}_2}}{V}\right)^3} = \frac{1}{4} \times \frac{\left(\frac{n_{\text{NH}_3}}{V}\right)^2}{\left(\frac{n_{\text{N}_2}}{V}\right)\left(\frac{n_{\text{H}_2}}{V}\right)^3} = \frac{1}{4} \times Q_1 < K.$$

- Since $Q < K$, the reaction shifts to the right—toward the direction of fewer gas moles—to reestablish equilibrium.

Consider the same reaction mixture at equilibrium again. What happens if, this time, we pull *up* on the piston, *increasing* the volume (Figure 15.9b)? The higher volume results in a lower pressure, and the system responds to bring the pressure back up. It does this by shifting to the left, converting every 2 mol of gas particles into 4 mol of gas particles, increasing the pressure and minimizing the disturbance. Like a decrease in volume, an increase in volume changes Q .

For example, suppose we increase the volume of a nitrogen, hydrogen, and ammonia equilibrium mixture to twice its original volume:

$$\bullet \text{ Before doubling the volume: } Q_1 = K = \frac{[\text{NH}_3]^2}{[\text{N}_2][\text{H}_2]^3} = \frac{\left(\frac{n_{\text{NH}_3}}{V}\right)^2}{\left(\frac{n_{\text{N}_2}}{V}\right)\left(\frac{n_{\text{H}_2}}{V}\right)^3}$$

- Immediately after doubling the volume:

$$Q_2 = \frac{\left(\frac{n_{\text{NH}_3}}{2V}\right)^2}{\left(\frac{n_{\text{N}_2}}{2V}\right)\left(\frac{n_{\text{H}_2}}{2V}\right)^3} = \frac{\frac{1}{4}\left(\frac{n_{\text{NH}_3}}{V}\right)^2}{\frac{1}{2}\left(\frac{n_{\text{N}_2}}{V}\right)\frac{1}{8}\left(\frac{n_{\text{H}_2}}{V}\right)^3} = 4 \times \frac{\left(\frac{n_{\text{NH}_3}}{V}\right)^2}{\left(\frac{n_{\text{N}_2}}{V}\right)\left(\frac{n_{\text{H}_2}}{V}\right)^3} = 4 \times Q_1 < K.$$

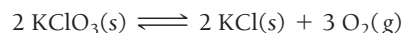
- Since $Q < K$, the reaction shifts to the right to reestablish equilibrium.

Consider again the same reaction mixture at equilibrium. What happens if, this time, we keep the volume the same but increase the pressure by *adding an inert gas* to the mixture? Although the overall pressure of the mixture increases, the volume of the reaction mixture does not change and so Q does not change. Consequently, there is no effect, and the reaction does not shift in either direction. Similarly, if a reaction has equal moles of gas particles on both sides of the reaction, the effects of a volume change on Q cancel each other out and there is no effect on the reaction (the reaction does not shift in either direction).

EXAMPLE 15.15

The Effect of a Volume Change on Equilibrium

Consider the following reaction at chemical equilibrium:



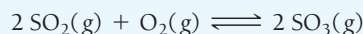
What is the effect of decreasing the volume of the reaction mixture? Increasing the volume of the reaction mixture? Adding an inert gas at constant volume?

SOLUTION

The chemical equation has 3 mol of gas on the right and zero mol of gas on the left. Decreasing the volume of the reaction mixture increases the pressure and causes the reaction to shift to the left (toward the side with fewer moles of gas particles). Increasing the volume of the reaction mixture decreases the pressure and causes the reaction to shift to the right (toward the side with more moles of gas particles). Adding an inert gas has no effect.

FOR PRACTICE 15.15

Consider the following reaction at chemical equilibrium:




What is the effect of decreasing the volume of the reaction mixture? Increasing the volume of the reaction mixture?

Summarizing the Effect of Volume Change on Equilibrium:

If a chemical system is at equilibrium:

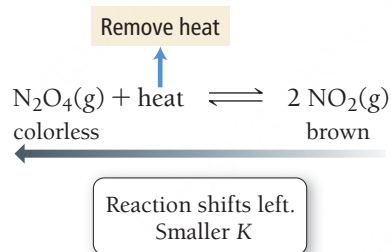
- Decreasing the volume causes the reaction to shift in the direction that has *the fewer moles of gas particles*.
- Increasing the volume causes the reaction to shift in the direction that has *the greater number of moles of gas particles*.
- Adding an inert gas to the mixture at a fixed volume has no effect on the equilibrium.
- When a reaction has an equal number of moles of gas on both sides of the chemical equation, a change in volume produces no effect on the equilibrium.

Le Châtelier's Principle: Changing Temperature



▲ FIGURE 15.10 Le Châtelier's Principle: The Effect of a Temperature Change Because the reaction is endothermic, raising the temperature causes a shift to the right, toward the formation of brown NO₂.

In contrast, lowering the temperature (removing heat) of a reaction mixture of these two gases causes the reaction to shift left, releasing heat, forming fewer products, and lowering the value of K :



We can quantify the relationship between the value of the equilibrium constant and the temperature using an equation derived from thermodynamic considerations. We will cover this equation in Section 18.9.

Summarizing the Effect of a Temperature Change on Equilibrium:

In an *exothermic* chemical reaction, heat is a product.

- Increasing the temperature causes an exothermic reaction to *shift left* (in the direction of the reactants); the value of the equilibrium constant decreases.
- Decreasing the temperature causes an exothermic reaction to *shift right* (in the direction of the products); the value of the equilibrium constant increases.

In an *endothermic* chemical reaction, heat is a reactant.

- Increasing the temperature causes an endothermic reaction to *shift right* (in the direction of the products); the equilibrium constant increases.
- Decreasing the temperature causes an endothermic reaction to *shift left* (in the direction of the reactants); the equilibrium constant decreases.

Adding heat favors the endothermic direction. Removing heat favors the exothermic direction.

EXAMPLE 15.16**The Effect of a Temperature Change on Equilibrium**

The following reaction is endothermic:



What is the effect of increasing the temperature of the reaction mixture? Decreasing the temperature?

SOLUTION

Since the reaction is endothermic, we can think of heat as a reactant:

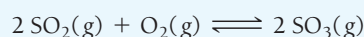


Raising the temperature is equivalent to adding a reactant, causing the reaction to shift to the right.

Lowering the temperature is equivalent to removing a reactant, causing the reaction to shift to the left.

FOR PRACTICE 15.16

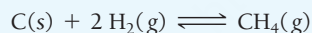
The following reaction is exothermic:




What is the effect of increasing the temperature of the reaction mixture? Decreasing the temperature?

SELF-ASSESSMENT**QUIZ**

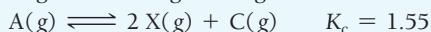
1. What is the correct expression for the equilibrium constant (K_c) for the reaction between carbon and hydrogen gas to form methane shown here?




- a) $K_c = \frac{[\text{CH}_4]}{[\text{H}_2]}$ b) $K_c = \frac{[\text{CH}_4]}{[\text{C}][\text{H}_2]}$
 c) $K_c = \frac{[\text{CH}_4]}{[\text{C}][\text{H}_2]^2}$ d) $K_c = \frac{[\text{CH}_4]}{[\text{H}_2]^2}$
2. The equilibrium constant for the reaction shown here is $K_c = 1.0 \times 10^3$. A reaction mixture at equilibrium contains $[\text{A}] = 1.0 \times 10^{-3} \text{ M}$. What is the concentration of B in the mixture?



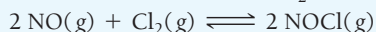
- a) $1.0 \times 10^{-3} \text{ M}$ b) 1.0 M
 c) 2.0 M d) $1.0 \times 10^3 \text{ M}$
3. Use the data below to find the equilibrium constant (K_c) for the reaction $\text{A}(\text{g}) \rightleftharpoons 2 \text{B}(\text{g}) + \text{C}(\text{g})$:



- a) 984 b) 26.8 c) 6.10×10^{-4} d) 2.44×10^{-3}
4. The reaction shown here has a $K_p = 4.5 \times 10^2$ at 825 K. Find K_c for the reaction at this temperature.



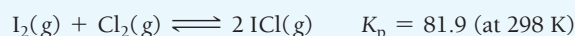
- a) 0.098 b) 2.1×10^6 c) 6.6 d) 4.5×10^{-2}
5. Consider the reaction between NO and Cl_2 to form NOCl.



A reaction mixture at a certain temperature initially contains only $[\text{NO}] = 0.50 \text{ M}$ and $[\text{Cl}_2] = 0.50 \text{ M}$. After the reaction comes to

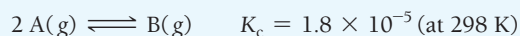
equilibrium, the concentration of NOCl is 0.30 M. Find the value of the equilibrium constant (K_c) at this temperature.

- a) 11 b) 4.3 c) 6.4 d) 0.22
6. For the reaction $2 \text{A}(\text{g}) \rightleftharpoons \text{B}(\text{g})$, the equilibrium constant is $K_p = 0.76$. A reaction mixture initially contains 2.0 atm of each gas ($P_A = 2.0 \text{ atm}$ and $P_B = 2.0 \text{ atm}$). Which statement is true of the reaction mixture?
- a) The reaction mixture is at equilibrium.
 b) The reaction mixture will proceed toward products.
 c) The reaction mixture will proceed toward reactants.
 d) It is not possible to determine from the information given the future direction of the reaction mixture.
7. Consider the reaction between iodine gas and chlorine gas to form iodine monochloride.



A reaction mixture at 298 K initially contains $P_{\text{I}_2} = 0.25 \text{ atm}$ and $P_{\text{Cl}_2} = 0.25 \text{ atm}$. What is the partial pressure of iodine monochloride when the reaction reaches equilibrium?

- a) 0.17 atm b) 0.64 atm
 c) 0.41 atm d) 2.3 atm
8. Consider the reaction of A to form B.



A reaction mixture at 298 K initially contains $[\text{A}] = 0.50 \text{ M}$. What is the concentration of B when the reaction reaches equilibrium?

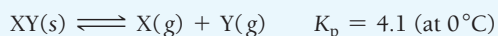
- a) $9.0 \times 10^{-6} \text{ M}$ b) 0.060 M
 c) 0.030 M d) $4.5 \times 10^{-6} \text{ M}$

9. The decomposition of NH_4HS is endothermic:



Which change to an equilibrium mixture of this reaction results in the formation of more H_2S ?

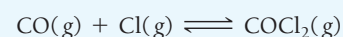
- a decrease in the volume of the reaction vessel (at constant temperature)
 - an increase in the amount of NH_4HS in the reaction vessel
 - an increase in temperature
 - all of the above
10. The solid XY decomposes into gaseous X and Y :



If the reaction is carried out in a 22.4-L container, which initial amounts of X and Y result in the formation of solid XY ?

- 5 mol X ; 0.5 mol Y
- 2.0 mol X ; 2.0 mol Y
- 1 mol X ; 1 mol Y
- none of the above

11. What is the effect of adding helium gas (at constant volume) to an equilibrium mixture of this reaction:



- The reaction shifts toward the products.
 - The reaction shifts toward the reactants.
 - The reaction does not shift in either direction.
 - The reaction slows down.
12. The reaction $\text{X}_2(g) \rightleftharpoons 2 \text{X}(g)$ occurs in a closed reaction vessel at constant volume and temperature. Initially, the vessel contains only X_2 at a pressure of 1.55 atm. After the reaction reaches equilibrium, the total pressure is 2.85 atm. What is the value of the equilibrium constant, K_p , for the reaction?
- 27
 - 10
 - 5.2
 - 32

Answers: 1. d; 2. b; 3. d; 4. a; 5. c; 6. b; 7. c; 8. d; 9. c; 10. d; 11. c; 12. a

CHAPTER SUMMARY 15

REVIEW

MasteringChemistry™ provides end-of-chapter exercises, feedback-enriched tutorial problems, animations, and interactive activities to encourage problem solving practice and deeper understanding of key concepts and topics.

KEY LEARNING OUTCOMES

CHAPTER OBJECTIVES	ASSESSMENT
Express Equilibrium Constants for Chemical Equations (15.3)	• Example 15.1 For Practice 15.1 Exercises 21, 22
Manipulate the Equilibrium Constant to Reflect Changes in the Chemical Equation (15.3)	• Example 15.2 For Practice 15.2 For More Practice 15.2 Exercises 27–30
Relate K_p and K_c (15.4)	• Example 15.3 For Practice 15.3 Exercises 31, 32
Write Equilibrium Expressions for Reactions Involving a Solid or a Liquid (15.5)	• Example 15.4 For Practice 15.4 Exercises 33, 34
Find Equilibrium Constants from Experimental Concentration Measurements (15.6)	• Examples 15.5, 15.6 For Practice 15.5, 15.6 Exercises 35, 36, 43, 44
Predict the Direction of a Reaction by Comparing Q and K (15.7)	• Example 15.7 For Practice 15.7 Exercises 47–50
Calculate Equilibrium Concentrations from the Equilibrium Constant and One or More Equilibrium Concentrations (15.8)	• Example 15.8 For Practice 15.8 Exercises 37–46
Find Equilibrium Concentrations from Initial Concentrations and the Equilibrium Constant (15.8)	• Examples 15.9, 15.10 For Practice 15.9, 15.10 Exercises 53–58
Calculate Equilibrium Partial Pressures from the Equilibrium Constant and Initial Partial Pressures (15.8)	• Example 15.11 For Practice 15.11 Exercises 59, 60
Find Equilibrium Concentrations from Initial Concentrations in Cases with a Small Equilibrium Constant (15.8)	• Examples 15.12, 15.13 For Practice 15.12, 15.13 Exercises 61, 62

Determine the Effect of a Concentration Change on Equilibrium (15.9)	• Example 15.14 For Practice 15.14 Exercises 63–66
Determine the Effect of a Volume Change on Equilibrium (15.9)	• Example 15.15 For Practice 15.15 Exercises 67, 68
Determine the Effect of a Temperature Change on Equilibrium (15.9)	• Example 15.16 For Practice 15.16 Exercises 69, 70

KEY TERMS

Section 15.2

reversible (641)
dynamic equilibrium (641)

Section 15.3

equilibrium constant (K) (643)
law of mass action (643)

Section 15.7

reaction quotient (Q) (654)

Section 15.9

Le Châtelier's principle (665)

KEY CONCEPTS

The Equilibrium Constant (15.1)

- The equilibrium constant, K expresses the relative concentrations of the reactants and the products at equilibrium.
- The equilibrium constant measures how far a reaction proceeds toward products: a large K (much greater than 1) indicates a high concentration of products at equilibrium, and a small K (much less than 1) indicates a low concentration of products at equilibrium.

Dynamic Equilibrium (15.2)

- Most chemical reactions are reversible; they can proceed in either the forward or the reverse direction.
- When a chemical reaction is in dynamic equilibrium, the rate of the forward reaction equals the rate of the reverse reaction, so the net concentrations of reactants and products do not change. However, this does *not* imply that the concentrations of the reactants and the products are equal at equilibrium.

The Equilibrium Constant Expression (15.3)

- The equilibrium constant expression is given by the law of mass action and is equal to the concentrations of the products, raised to their stoichiometric coefficients, divided by the concentrations of the reactants, raised to their stoichiometric coefficients.
- When the equation for a chemical reaction is reversed, multiplied, or added to another equation, K must be modified accordingly.

The Equilibrium Constant, K (15.4)

- The equilibrium constant can be expressed in terms of concentrations (K_c) or in terms of partial pressures (K_p). These two constants are related by Equation 15.2. Concentration must always be expressed in units of molarity for K_c . Partial pressures must always be expressed in units of atmospheres for K_p .

States of Matter and the Equilibrium Constant (15.5)

- The equilibrium constant expression contains only partial pressures or concentrations of reactants and products that exist as gases or solutes dissolved in solution. Pure liquids and solids are not included in the expression for the equilibrium constant.

Calculating K (15.6)

- We can calculate the equilibrium constant from equilibrium concentrations or partial pressures by substituting measured values into the expression for the equilibrium constant (as obtained from the law of mass action).
- In most cases, we can calculate the equilibrium concentrations of the reactants and products—and therefore the value of the equilibrium constant—from the initial concentrations of the reactants and products and the equilibrium concentration of *just one* reactant or product.

The Reaction Quotient, Q (15.7)

- The reaction quotient, Q , is the ratio of the concentrations (or partial pressures) of products raised to their stoichiometric coefficients to the concentrations of reactants raised to their stoichiometric coefficients *at any point in the reaction*.
- Like K , Q can be expressed in terms of concentrations (Q_c) or partial pressures (Q_p).
- At equilibrium, Q is equal to K ; therefore, we can determine the direction in which a reaction proceeds by comparing Q to K . If $Q < K$, the reaction moves in the direction of the products; if $Q > K$, the reaction moves in the reverse direction.

Finding Equilibrium Concentrations (15.8)

- There are two general types of problems in which K is given and one (or more) equilibrium concentrations can be found:
 1. K and all but one equilibrium concentration are given.
 2. K and *only* initial concentrations are given.
- We solve the first type by rearranging the law of mass action and substituting the given values.
- We solve the second type by creating an ICE table and using a variable x to represent the change in concentration.

Le Châtelier's Principle (15.9)

- When a system at equilibrium is disturbed—by a change in the amount of a reactant or product, a change in volume, or a change in temperature—the system shifts in the direction that minimizes the disturbance.

KEY EQUATIONS AND RELATIONSHIPS

Expression for the Equilibrium Constant, K_c (15.3)



$$K = \frac{[C]^c[D]^d}{[A]^a[B]^b} \text{ (equilibrium concentrations only)}$$

Relationship between the Equilibrium Constant and the Chemical Equation (15.3)

1. If you reverse the equation, invert the equilibrium constant.
2. If you multiply the coefficients in the equation by a factor, raise the equilibrium constant to the same factor.
3. If you add two or more individual chemical equations to obtain an overall equation, multiply the corresponding equilibrium constants by each other to obtain the overall equilibrium constant.

Expression for the Equilibrium Constant, K_p (15.4)




$$K_p = \frac{P_C^c P_D^d}{P_A^a P_B^b} \text{ (equilibrium partial pressures only)}$$

Relationship between the Equilibrium Constants, K_c and K_p (15.4)

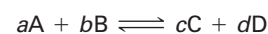
$$K_p = K_c(RT)^{\Delta n}$$

The Reaction Quotient, Q_c (15.7)



$$Q_c = \frac{[C]^c[D]^d}{[A]^a[B]^b} \text{ (concentration at any point in the reaction)}$$

The Reaction Quotient, Q_p (15.7)



$$Q_p = \frac{P_C^c P_D^d}{P_A^a P_B^b} \text{ (partial pressures at any point in the reaction)}$$

Relationship of Q to the Direction of the Reaction (15.7)

- | | |
|---------|-----------------------------|
| $Q < K$ | Reaction goes to the right. |
| $Q > K$ | Reaction goes to the left. |
| $Q = K$ | Reaction is at equilibrium. |

EXERCISES

REVIEW QUESTIONS

1. How does a developing fetus get oxygen in the womb?
2. What is dynamic equilibrium? Why is it called *dynamic*?
3. Give the general expression for the equilibrium constant of the following generic reaction:

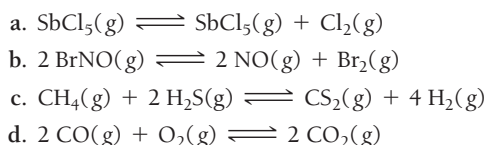
$$aA + bB \rightleftharpoons cC + dD$$
4. What is the significance of the equilibrium constant? What does a large equilibrium constant tell us about a reaction? A small one?
5. What happens to the value of the equilibrium constant for a reaction if the reaction equation is reversed? Multiplied by a constant?
6. If two reactions sum to an overall reaction, and the equilibrium constants for the two reactions are K_1 and K_2 what is the equilibrium constant for the overall reaction?
7. Explain the difference between K_c and K_p . For a given reaction, how are the two constants related?
8. What units should you use when expressing concentrations or partial pressures in the equilibrium constant? What are the units of K_p and K_c ? Explain.
9. Why do we omit the concentrations of solids and liquids from equilibrium expressions?
10. Does the value of the equilibrium constant depend on the initial concentrations of the reactants and products? Do the equilibrium concentrations of the reactants and products depend on their initial concentrations? Explain.
11. Explain how you might deduce the equilibrium constant for a reaction in which you know the initial concentrations of the reactants and products and the equilibrium concentration of only one reactant or product.
12. What is the definition of the reaction quotient (Q) for a reaction? What does Q measure?
13. What is the value of Q when each reactant and product is in its standard state? (See Section 9.10 for the definition of standard states.)
14. In what direction does a reaction proceed for each condition: a. $Q < K$; b. $Q > K$; and c. $Q = K$?
15. Many equilibrium calculations involve finding the equilibrium concentrations of reactants and products given their initial concentrations and the equilibrium constant. Outline the general procedure used in solving these kinds of problems.
16. In equilibrium problems involving equilibrium constants that are small relative to the initial concentrations of reactants, we can often assume that the quantity x (which represents how far the reaction proceeds toward products) is small. When this assumption is made, we can ignore the quantity x when it is subtracted from a large number but not when it is multiplied by a large number. In other words, $2.5 - x \approx 2.5$, but $2.5x \neq 2.5$. Explain why we can ignore a small x in the first case but not in the second.
17. What happens to a chemical system at equilibrium when equilibrium is disturbed?
18. What is the effect of a change in concentration of a reactant or product on a chemical reaction initially at equilibrium?
19. What is the effect of a change in volume on a chemical reaction (that includes gaseous reactants or products) initially at equilibrium?
20. What is the effect of a temperature change on a chemical reaction initially at equilibrium? How does the effect differ for an exothermic reaction compared to an endothermic one?

PROBLEMS BY TOPIC

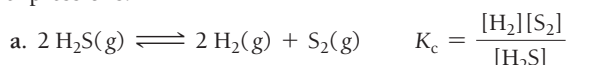
Note: Answers to all odd-numbered Problems, numbered in blue, can be found in Appendix III. Exercises in the Problems by Topic section are paired, with each odd-numbered problem followed by a similar even-numbered problem. Exercises in the Cumulative Problems section are also paired but more loosely. Because of their nature, Challenge Problems and Conceptual Problems are unpaired.

Equilibrium and the Equilibrium Constant Expression

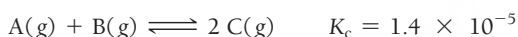
21. Write an expression for the equilibrium constant of each chemical equation:



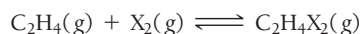
22. Find and fix each mistake in the equilibrium constant expressions:




23. When this reaction comes to equilibrium, will the concentrations of the reactants or products be greater? Does the answer to this question depend on the initial concentrations of the reactants and products?



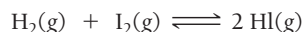
24. Ethene (C_2H_4) can be halogenated by this reaction:



where X_2 can be Cl_2 (green), Br_2 (brown), or I_2 (purple). Examine the three figures representing equilibrium concentrations in this reaction at the same temperature for the three different halogens. Rank the equilibrium constants for the three reactions from largest to smallest.

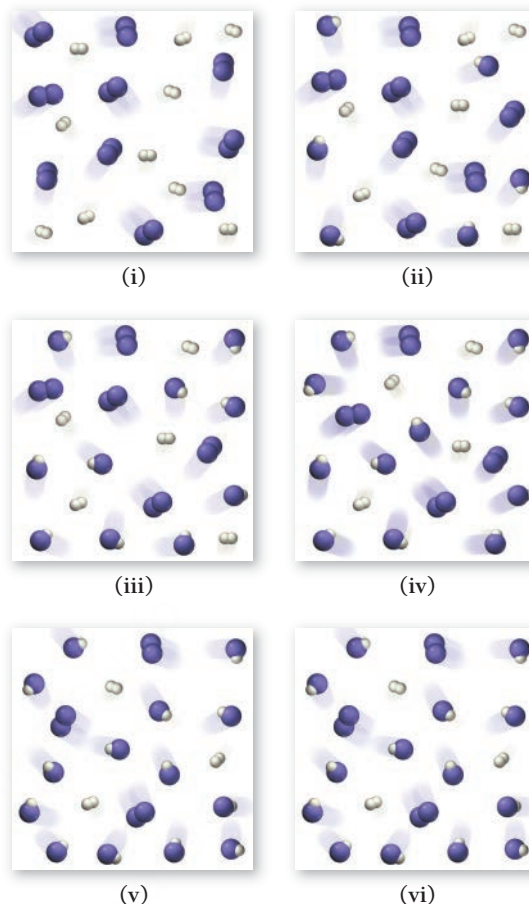


25. H_2 and I_2 are combined in a flask and allowed to react according to the reaction:

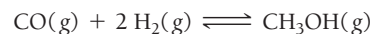


Examine the figures (sequential in time) and answer the questions:

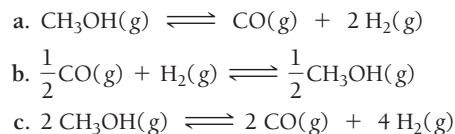
- a. Which figure represents the point at which equilibrium is reached?
 b. How would the series of figures change in the presence of a catalyst?
 c. Would there be different amounts of reactants and products in the final figure (vi) in the presence of a catalyst?



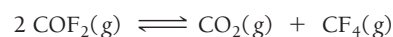
26. A chemist trying to synthesize a particular compound attempts two different synthesis reactions. The equilibrium constants for the two reactions are 23.3 and 2.2×10^4 at room temperature. However, upon carrying out both reactions for 15 minutes, the chemist finds that the reaction with the smaller equilibrium constant produces more of the desired product. Explain how this might be possible.
27. This reaction has an equilibrium constant of $K_p = 2.26 \times 10^4$ at 298 K :



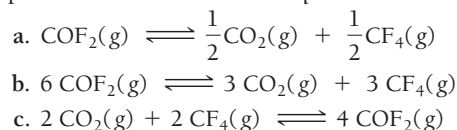
Calculate K_p for each reaction and predict whether reactants or products will be favored at equilibrium:



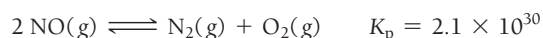

28. This reaction has an equilibrium constant of $K_p = 2.2 \times 10^6$ at 298 K :



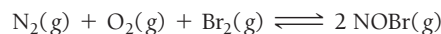
Calculate K_p for each reaction and predict whether reactants or products will be favored at equilibrium:



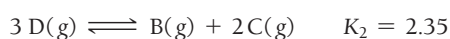
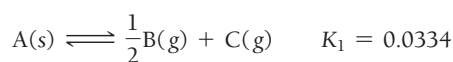
29. Consider the reactions and their respective equilibrium constants:



Use these reactions and their equilibrium constants to predict the equilibrium constant for the following reaction:

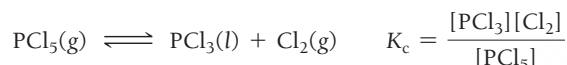


30. Use the following reactions and their equilibrium constants to predict the equilibrium constant for this reaction:
 $2\text{A(s)} \rightleftharpoons 3\text{D(g)}$



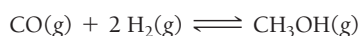
K_p , K_c , and Heterogeneous Equilibria

31. Calculate K_c for each reaction.
- $\text{I}_2\text{(g)} \rightleftharpoons 2\text{I(g)} \quad K_p = 6.26 \times 10^{-22}$ (at 298 K)
 - $\text{CH}_4\text{(g)} + \text{H}_2\text{O(g)} \rightleftharpoons \text{CO(g)} + 3\text{H}_2\text{(g)}$
 - $\text{I}_2\text{(g)} + \text{Cl}_2\text{(g)} \rightleftharpoons 2\text{ICl(g)} \quad K_p = 81.9$ (at 298 K)
32. Calculate K_p for each reaction.
- $\text{N}_2\text{O}_4\text{(g)} \rightleftharpoons 2\text{NO}_2\text{(g)} \quad K_c = 5.9 \rightleftharpoons 10^{-3}$ (at 298 K)
 - $\text{N}_2\text{(g)} + 3\text{H}_2\text{(g)} \rightleftharpoons 2\text{NH}_3\text{(g)} \quad K_c = 3.7 \times 10^8$ (at 298 K)
 - $\text{N}_2\text{(g)} + \text{O}_2\text{(g)} \rightleftharpoons 2\text{NO(g)} \quad K_c = 4.10 \times 10^{-31}$ (at 298 K)
33. Write an equilibrium expression for each chemical equation involving one or more solid or liquid reactants or products.
- $\text{CO}_3^{2-}(\text{aq}) + \text{H}_2\text{O(l)} \rightleftharpoons \text{HCO}_3^-(\text{aq}) + \text{OH}^-(\text{aq})$
 - $2\text{KClO}_3\text{(s)} \rightleftharpoons 2\text{KCl(s)} + 3\text{O}_2\text{(g)}$
 - $\text{HF(aq)} + \text{H}_2\text{O(l)} \rightleftharpoons \text{H}_3\text{O}^+(\text{aq}) + \text{F}^-(\text{aq})$
 - $\text{NH}_3(\text{aq}) + \text{H}_2\text{O(l)} \rightleftharpoons \text{NH}_4^+(\text{aq}) + \text{OH}^-(\text{aq})$
34. Find and fix the mistake in the equilibrium expression:



Relating the Equilibrium Constant to Equilibrium Concentrations and Equilibrium Partial Pressures

35. Consider the reaction:



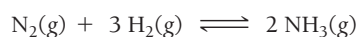
An equilibrium mixture of this reaction at a certain temperature has $[\text{CO}] = 0.105\text{ M}$, $[\text{H}_2] = 0.114\text{ M}$, and $[\text{CH}_3\text{OH}] = 0.185\text{ M}$. What is the value of the equilibrium constant (K_c) at this temperature?

36. Consider the reaction:



An equilibrium mixture of this reaction at a certain temperature has $[\text{NH}_3] = 0.278\text{ M}$ and $[\text{H}_2\text{S}] = 0.355\text{ M}$. What is the value of the equilibrium constant (K_c) at this temperature?

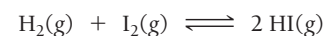
37. Consider the reaction:



Complete the table. Assume that all concentrations are equilibrium concentrations in M.

$T\text{ (K)}$	$[\text{N}_2]$	$[\text{H}_2]$	$[\text{NH}_3]$	K_c
500	0.115	0.105	0.439	_____
575	0.110	_____	0.128	9.6
775	0.120	0.140	_____	0.0584

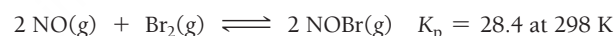
38. Consider the reaction:



Complete the table. Assume that all concentrations are equilibrium concentrations in M.

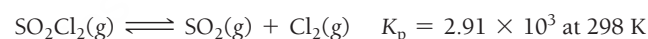
$T\text{ (}^\circ\text{C)}$	$[\text{H}_2]$	$[\text{I}_2]$	$[\text{HI}]$	K_c
25	0.0355	0.0388	0.922	_____
340	_____	0.0455	0.387	9.6
445	0.0485	0.0468	_____	50.2

39. Consider the reaction:



In a reaction mixture at equilibrium, the partial pressure of NO is 108 torr and that of Br_2 is 126 torr. What is the partial pressure of NOBr in this mixture?

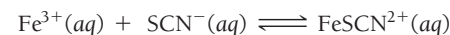
40. Consider the reaction:



In a reaction at equilibrium, the partial pressure of SO_2 is 137 torr and that of Cl_2 is 285 torr. What is the partial pressure of SO_2Cl_2 in this mixture?

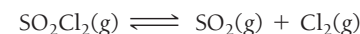
41. For the reaction $\text{A(g)} \rightleftharpoons 2\text{B(g)}$, a reaction vessel initially contains only A at a pressure of $P_A = 1.32\text{ atm}$. At equilibrium, $P_A = 0.25\text{ atm}$. Calculate the value of K_p . (Assume no changes in volume or temperature.)
42. For the reaction $2\text{A(g)} \rightleftharpoons \text{B(g)} + 2\text{C(g)}$, a reaction vessel initially contains only A at a pressure of $P_A = 225\text{ mmHg}$. At equilibrium, $P_A = 55\text{ mmHg}$. Calculate the value of K_p . (Assume no changes in volume or temperature.)

43. Consider the reaction:



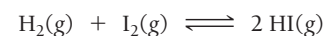
A solution is made containing an initial $[\text{Fe}^{3+}]$ of $1.0 \times 10^{-3}\text{ M}$ and an initial $[\text{SCN}^-]$ of $8.0 \times 10^{-4}\text{ M}$. At equilibrium, $[\text{FeSCN}^{2+}] = 1.7 \times 10^{-4}\text{ M}$. Calculate the value of the equilibrium constant (K_c).

44. Consider the reaction:



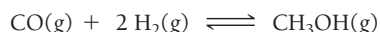
A reaction mixture is made containing an initial $[\text{SO}_2\text{Cl}_2]$ of 0.020 M . At equilibrium, $[\text{Cl}_2] = 1.2 \times 10^{-2}\text{ M}$. Calculate the value of the equilibrium constant (K_c).

45. Consider the reaction:



A reaction mixture in a 3.67 L flask at a certain temperature initially contains 0.763 g H_2 and 96.9 g I_2 . At equilibrium, the flask contains 90.4 g HI. Calculate the equilibrium constant (K_c) for the reaction at this temperature.

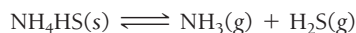
46. Consider the reaction:



A reaction mixture in a 5.19 L flask at a certain temperature contains 26.9 g CO and 2.34 g H₂. At equilibrium, the flask contains 8.65 g CH₃OH. Calculate the equilibrium constant (K_c) for the reaction at this temperature.

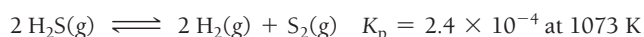
The Reaction Quotient and Reaction Direction

47. Consider the reaction:



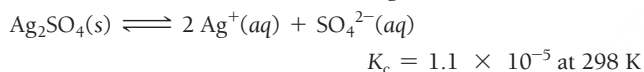
At a certain temperature, $K_c = 8.5 \times 10^{-3}$. A reaction mixture at this temperature containing solid NH₄HS has $[\text{NH}_3] = 0.166 \text{ M}$ and $[\text{H}_2\text{S}] = 0.166 \text{ M}$. Will more of the solid form, or will some of the existing solid decompose as equilibrium is reached?

48. Consider the reaction:



A reaction mixture contains 0.112 atm of H₂, 0.055 atm of S₂, and 0.445 atm of H₂S. Is the reaction mixture at equilibrium? If not, in what direction will the reaction proceed?

49. Silver sulfate dissolves in water according to the reaction:



A 1.5-L solution contains 6.55 g of dissolved silver sulfate. If additional solid silver sulfate is added to the solution, will it dissolve?

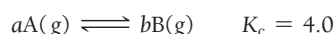
50. Nitrogen dioxide reacts with itself according to the reaction:



A 2.25-L container contains 0.055 mol of NO₂ and 0.082 mol of N₂O₄ at 298 K. Is the reaction at equilibrium? If not, in what direction will the reaction proceed?

Finding Equilibrium Concentrations from Initial Concentrations and the Equilibrium Constant

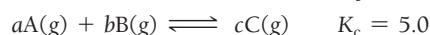
51. Consider the reaction and the associated equilibrium constant:



Find the equilibrium concentrations of A and B for each value of a and b . Assume that the initial concentration of A in each case is 1.0 M and that no B is present at the beginning of the reaction.

- $a = 1; b = 1$
- $a = 2; b = 2$
- $a = 1; b = 2$

52. Consider the reaction and the associated equilibrium constant:



Find the equilibrium concentrations of A, B, and C for each value of a , b , and c . Assume that the initial concentrations of A and B are each 1.0 M and that no product is present at the beginning of the reaction.

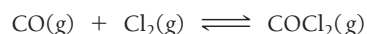
- $a = 1; b = 1; c = 2$
- $a = 1; b = 1; c = 1$
- $a = 2; b = 1; c = 1$ (set up equation for x ; don't solve)

53. For the reaction,
- $K_c = 0.513$
- at 500 K.



If a reaction vessel initially contains an N₂O₄ concentration of 0.0500 M at 500 K, what are the equilibrium concentrations of N₂O₄ and NO₂ at 500 K?

54. For the reaction,
- $K_c = 255$
- at 1000 K.



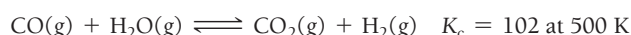
If a reaction mixture initially contains a CO concentration of 0.1500 M and a Cl₂ concentration of 0.175 M at 1000 K, what are the equilibrium concentrations of CO, Cl₂, and COCl₂ at 1000 K?

55. Consider the reaction:



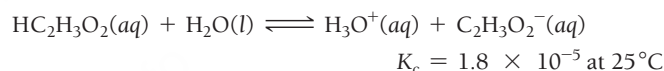
If a mixture of solid nickel (II) oxide and 0.20 M carbon monoxide comes to equilibrium at 1500 K, what is the equilibrium concentration of CO₂?

56. Consider the reaction:



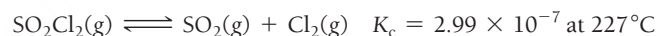
If a reaction mixture initially contains 0.110 M CO and 0.110 M H₂O, what is the equilibrium concentration of each of the reactants and products?

57. Consider the reaction:



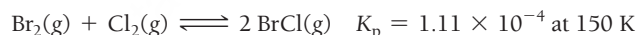
If a solution initially contains 0.210 M HC₂H₃O₂, what is the equilibrium concentration of H₃O⁺ at 25 °C?

58. Consider the reaction:



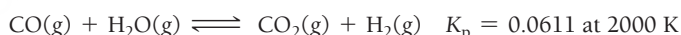
If a reaction mixture initially contains 0.175 M SO₂Cl₂, what is the equilibrium concentration of Cl₂ at 227 °C?

59. Consider the reaction:



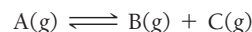
A reaction mixture initially contains a Br₂ partial pressure of 755 torr and a Cl₂ partial pressure of 735 torr at 150 K. Calculate the equilibrium partial pressure of BrCl.

60. Consider the reaction:



A reaction mixture initially contains a CO partial pressure of 1344 torr and a H₂O partial pressure of 1766 torr at 2000 K. Calculate the equilibrium partial pressures of each of the products.

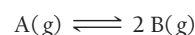
61. Consider the reaction:



Find the equilibrium concentrations of A, B, and C for each value of K_c . Assume that the initial concentration of A in each case is 1.0 M and that the reaction mixture initially contains no products. Make any appropriate simplifying assumptions.

- $K_c = 1.0$
- $K_c = 0.010$
- $K_c = 1.0 \times 10^{-5}$

62. Consider the reaction:

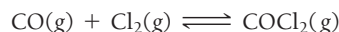


Find the equilibrium partial pressures of A and B for each value of K . Assume that the initial partial pressure of B in each case is 1.0 atm and that the initial partial pressure of A is 0.0 atm. Make any appropriate simplifying assumptions.

- $K_c = 1.0$
- $K_c = 1.0 \times 10^{-4}$
- $K_c = 1.0 \times 10^5$

Le Châtelier's Principle

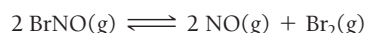
63. Consider this reaction at equilibrium:



Predict whether the reaction will shift left, shift right, or remain unchanged after each disturbance:

- COCl_2 is added to the reaction mixture.
- Cl_2 is added to the reaction mixture.
- COCl_2 is removed from the reaction mixture.

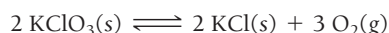
64. Consider this reaction at equilibrium:



Predict whether the reaction will shift left, shift right, or remain unchanged after each disturbance.

- NO is added to the reaction mixture.
- BrNO is added to the reaction mixture.
- Br_2 is removed from the reaction mixture.

65. Consider this reaction at equilibrium:



Predict whether the reaction will shift left, shift right, or remain unchanged after each disturbance.

- O_2 is removed from the reaction mixture.
- KCl is added to the reaction mixture.
- KClO_3 is added to the reaction mixture.
- O_2 is added to the reaction mixture.

66. Consider this reaction at equilibrium:



Predict whether the reaction will shift left, shift right, or remain unchanged after each disturbance.

- C is added to the reaction mixture.
- H_2O is condensed and removed from the reaction mixture.
- CO is added to the reaction mixture.
- H_2 is removed from the reaction mixture.

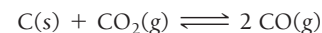
67. Each reaction is allowed to come to equilibrium, and then the volume is changed as indicated. Predict the effect (shift right, shift left, or no effect) of the indicated volume change.

- $\text{I}_2\text{(g)} \rightleftharpoons 2 \text{I(g)}$ (volume is increased)
- $2 \text{H}_2\text{S(g)} \rightleftharpoons 2 \text{H}_2\text{(g)} + \text{S}_2\text{(g)}$ (volume is decreased)
- $\text{I}_2\text{(g)} + \text{Cl}_2\text{(g)} \rightleftharpoons 2 \text{ICl(g)}$ (volume is decreased)

68. Each reaction is allowed to come to equilibrium, and then the volume is changed as indicated. Predict the effect (shift right, shift left, or no effect) of the indicated volume change.


- $\text{CO(g)} + \text{H}_2\text{O(g)} \rightleftharpoons \text{CO}_2\text{(g)} + \text{H}_2\text{(g)}$ (volume is decreased)
- $\text{PCl}_3\text{(g)} + \text{Cl}_2\text{(g)} \rightleftharpoons \text{PCl}_5\text{(g)}$ (volume is increased)
- $\text{CaCO}_3\text{(s)} \rightleftharpoons \text{CaO(s)} + \text{CO}_2\text{(g)}$ (volume is increased)

69. This reaction is endothermic:



Predict the effect (shift right, shift left, or no effect) of increasing and decreasing the reaction temperature. How does the value of the equilibrium constant depend on temperature?

70. This reaction is exothermic:



Predict the effect (shift right, shift left, or no effect) of increasing and decreasing the reaction temperature. How does the value of the equilibrium constant depend on temperature?

71. Coal, which is primarily carbon, can be converted to natural gas, primarily CH_4 , by the exothermic reaction:



Which disturbance favors CH_4 at equilibrium?

- adding more C to the reaction mixture
- adding more H_2 to the reaction mixture
- raising the temperature of the reaction mixture
- lowering the volume of the reaction mixture
- adding a catalyst to the reaction mixture
- adding neon gas to the reaction mixture

72. Coal can be used to generate hydrogen gas (a potential fuel) by the endothermic reaction:



If this reaction mixture is at equilibrium, predict whether each disturbance will result in the formation of additional hydrogen gas, the formation of less hydrogen gas, or have no effect on the quantity of hydrogen gas.



- adding C to the reaction mixture
- adding H_2O to the reaction mixture
- raising the temperature of the reaction mixture
- increasing the volume of the reaction mixture
- adding a catalyst to the reaction mixture
- adding an inert gas to the reaction mixture

CUMULATIVE PROBLEMS

73. Carbon monoxide replaces oxygen in oxygenated hemoglobin according to the reaction:

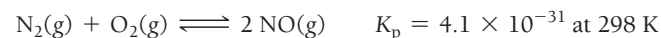


- Use the reactions and associated equilibrium constants at body temperature to find the equilibrium constant for the reaction just shown.



- Suppose that an air mixture becomes polluted with carbon monoxide at a level of 0.10%. Assuming the air contains 20.0% oxygen and that the oxygen and carbon monoxide ratios that dissolve in the blood are identical to the ratios in the air, what is the ratio of HbCO to HbO_2 in the bloodstream? Comment on the toxicity of carbon monoxide.

74. Nitrogen monoxide is a pollutant in the lower atmosphere that irritates the eyes and lungs and leads to the formation of acid rain. Nitrogen monoxide forms naturally in the atmosphere according to the endothermic reaction:



Use the ideal gas law to calculate the concentrations of nitrogen and oxygen present in air at a pressure of 1.0 atm and a temperature of 298 K. Assume that nitrogen composes 78% of air by volume and that oxygen composes 21% of air. Find the "natural" equilibrium concentration of NO in air in units of molecules/ cm^3 . How would you expect this concentration to change in an automobile engine in which combustion is occurring?

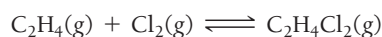
75. The reaction $\text{CO}_2(\text{g}) + \text{C}(\text{s}) \rightleftharpoons 2 \text{CO}(\text{g})$ has $K_p = 5.78$ at 1200 K.
- Calculate the total pressure at equilibrium when 4.45 g of CO_2 is introduced into a 10.0-L container and heated to 1200 K in the presence of 2.00 g of graphite.
 - Repeat the calculation of part a in the presence of 0.50 g of graphite.

76. A mixture of water and graphite is heated to 600 K. When the system comes to equilibrium, it contains 0.13 mol of H_2 , 0.13 mol of CO , 0.43 mol of H_2O , and some graphite. Some O_2 is added to the system, and a spark is applied so that the H_2 reacts completely with the O_2 . Find the amount of CO in the flask when the system returns to equilibrium.

77. At 650 K, the reaction $\text{MgCO}_3(\text{s}) \rightleftharpoons \text{MgO}(\text{s}) + \text{CO}_2(\text{g})$ has $K_p = 0.026$. A 10.0-L container at 650 K has 1.0 g of $\text{MgO}(\text{s})$ and CO_2 at $P = 0.0260$ atm. The container is then compressed to a volume of 0.100 L. Find the mass of MgCO_3 that is formed.

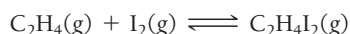
78. A system at equilibrium contains $\text{I}_2(\text{g})$ at a pressure of 0.21 atm and $\text{I}(\text{g})$ at a pressure of 0.23 atm. The system is then compressed to half its volume. Find the pressure of each gas when the system returns to equilibrium.

79. Consider the exothermic reaction:



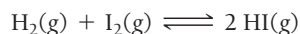
If you were trying to maximize the amount of $\text{C}_2\text{H}_4\text{Cl}_2$ produced, which tactic might you try? Assume that the reaction mixture reaches equilibrium.

- increasing the reaction volume
 - removing $\text{C}_2\text{H}_4\text{Cl}_2$ from the reaction mixture as it forms
 - lowering the reaction temperature
 - adding Cl_2
80. Consider the endothermic reaction:



If you were trying to maximize the amount of $\text{C}_2\text{H}_4\text{I}_2$ produced, which tactic might you try? Assume that the reaction mixture reaches equilibrium.

- decreasing the reaction volume
 - removing I_2 from the reaction mixture
 - raising the reaction temperature
 - adding C_2H_4 to the reaction mixture
81. Consider the reaction:



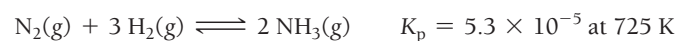
A reaction mixture at equilibrium at 175 K contains $P_{\text{H}_2} = 0.958$ atm, $P_{\text{I}_2} = 0.877$ atm, and $P_{\text{HI}} = 0.020$ atm. A second reaction mixture, also at 175 K, contains $P_{\text{H}_2} = P_{\text{I}_2} = 0.621$ atm, and $P_{\text{HI}} = 0.101$ atm. Is the second reaction at equilibrium? If not, what will be the partial pressure of HI when the reaction reaches equilibrium at 175 K?

82. Consider the reaction:



A reaction mixture initially containing 0.500 M H_2S and 0.500 M SO_2 contains 0.0011 M H_2O at a certain temperature. A second reaction mixture at the same temperature initially contains $[\text{H}_2\text{S}] = 0.250$ M and $[\text{SO}_2] = 0.325$ M. Calculate the equilibrium concentration of H_2O in the second mixture at this temperature.

83. Ammonia can be synthesized according to the reaction:



A 200.0-L reaction container initially contains 1.27 kg of N_2 and 0.310 kg of H_2 at 725 K. Assuming ideal gas behavior, calculate the mass of NH_3 (in g) present in the reaction mixture at equilibrium. What is the percent yield of the reaction under these conditions?

84. Hydrogen can be extracted from natural gas according to the reaction:



$$K_p = 45 \times 10^2 \text{ at } 825 \text{ K}$$

An 85.0-L reaction container initially contains 22.3 kg of CH_4 and 55.4 kg of CO_2 at 825 K. Assuming ideal gas behavior, calculate the mass of H_2 (in g) present in the reaction mixture at equilibrium. What is the percent yield of the reaction under these conditions?

85. The system described by the reaction: $\text{CO}(\text{g}) + \text{Cl}_2(\text{g}) \rightleftharpoons \text{COCl}_2(\text{g})$ is at equilibrium at a given temperature when $P_{\text{CO}} = 0.30$ atm, $P_{\text{Cl}_2} = 0.10$ atm, and $P_{\text{COCl}_2} = 0.60$ atm. Pressure of $\text{Cl}_2(\text{g}) = 0.40$ atm is added. Find the pressure of CO when the system returns to equilibrium.

86. A reaction vessel at 27 °C contains a mixture of SO_2 ($P = 3.00$ atm) and O_2 ($P = 1.00$ atm). When a catalyst is added, this reaction takes place: $2 \text{SO}_2(\text{g}) + \text{O}_2(\text{g}) \rightleftharpoons 2 \text{SO}_3(\text{g})$.

At equilibrium, the total pressure is 3.75 atm. Find the value of K_c .

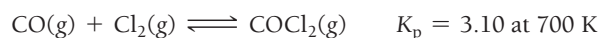
87. At 70 K, CCl_4 decomposes to carbon and chlorine. The K_p for the decomposition is 0.76. Find the starting pressure of CCl_4 at this temperature that will produce a total pressure of 1.0 atm at equilibrium.

88. The equilibrium constant for the reaction $\text{SO}_2(\text{g}) + \text{NO}_2(\text{g}) \rightleftharpoons \text{SO}_3(\text{g}) + \text{NO}(\text{g})$ is 3.0. Find the amount of NO_2 that must be added to 2.4 mol of SO_2 in order to form 1.2 mol of SO_3 at equilibrium.

89. A sample of $\text{CaCO}_3(\text{s})$ is introduced into a sealed container of volume 0.654 L and heated to 1000 K until equilibrium is reached. The K_p for the reaction $\text{CaCO}_3(\text{s}) \rightleftharpoons \text{CaO}(\text{s}) + \text{CO}_2(\text{g})$ is 3.9×10^{-2} at this temperature. Calculate the mass of $\text{CaO}(\text{s})$ that is present at equilibrium.

90. An equilibrium mixture contains N_2O_4 , ($P = 0.28$) and NO_2 ($P = 1.1$ atm) at 350 K. The volume of the container is doubled at constant temperature. Calculate the equilibrium pressures of the two gases when the system reaches a new equilibrium.

91. Carbon monoxide and chlorine gas react to form phosgene:

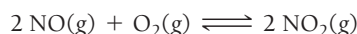


If a reaction mixture initially contains 215 torr of CO and 245 torr of Cl_2 , what is the mole fraction of COCl_2 when equilibrium is reached?

92. Solid carbon can react with gaseous water to form carbon monoxide gas and hydrogen gas. The equilibrium constant for the reaction at 700.0 K is $K_p = 1.60 \times 10^{-3}$. If a 1.55 L reaction vessel initially contains 145 torr of water at 700.0 K in contact with excess solid carbon, find the percent by mass of hydrogen gas of the gaseous reaction mixture at equilibrium.

CHALLENGE PROBLEMS

93. Consider the reaction:



- A reaction mixture at 175 K initially contains 522 torr of NO and 421 torr of O₂. At equilibrium, the total pressure in the reaction mixture is 748 torr. Calculate K_p at this temperature.
- A second reaction mixture at 175 K initially contains 255 torr of NO and 185 torr of O₂. What is the equilibrium partial pressure of NO₂ in this mixture?

94. Consider the reaction:



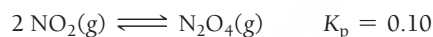
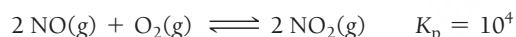
A 2.75-L reaction vessel at 950 K initially contains 0.100 mol of SO₂ and 0.100 mol of O₂. Calculate the total pressure (in atmospheres) in the reaction vessel when equilibrium is reached.

95. Nitrogen monoxide reacts with chlorine gas according to the reaction:



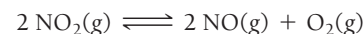
A reaction mixture initially contains equal partial pressures of NO and Cl₂. At equilibrium, the partial pressure of NOCl is 115 torr. What were the initial partial pressures of NO and Cl₂?

96. At a given temperature, a system containing O₂(g) and some oxides of nitrogen are described by these reactions:



A pressure of 1 atm of N₂O₄(g) is placed in a container at this temperature. Predict which, if any, component (other than N₂O₄) will be present at a pressure greater than 0.2 atm at equilibrium.

97. A sample of pure NO₂ is heated to 337 °C, at which temperature it partially dissociates according to the equation:



At equilibrium, the density of the gas mixture is 0.520 g/L at 0.750 atm. Calculate K_c for the reaction.

98. When N₂O₅(g) is heated, it dissociates into N₂O₃(g) and O₂(g) according to the reaction:



$K_c = 7.75$ at a given temperature

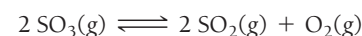
The N₂O₃(g) dissociates to give N₂O(g) and O₂(g) according to the reaction:



$K_c = 4.00$ at the same temperature

When 4.00 mol of N₂O₅(g) is heated in a 1.00-L reaction vessel to this temperature, the concentration of O₂(g) at equilibrium is 4.50 mol/L. Find the concentrations of all the other species in the equilibrium system.

99. A sample of SO₃ is introduced into an evacuated sealed container and heated to 600 K. The following equilibrium is established:



The total pressure in the system is 3.0 atm, and the mole fraction of O₂ is 0.12. Find K_p .

CONCEPTUAL PROBLEMS

100. A reaction $\text{A(g)} \rightleftharpoons \text{B(g)}$ has an equilibrium constant of 1.0×10^{-4} . For which of the initial reaction mixtures is the x is small approximation most likely to apply?

- [A] = 0.0010 M; [B] = 0.00 M
- [A] = 0.00 M; [B] = 0.10 M
- [A] = 0.10 M; [B] = 0.10 M
- [A] = 0.10 M; [B] = 0.00 M

101. The reaction $\text{A(g)} \rightleftharpoons 2 \text{B(g)}$ has an equilibrium constant of $K_c = 1.0$ at a given temperature. If a reaction vessel contains equal initial amounts (in moles) of A and B, will the direction in which the reaction proceeds depend on the volume of the reaction vessel? Explain.

102. A particular reaction has an equilibrium constant of $K_p = 0.50$. A reaction mixture is prepared in which all the reactants and products are in their standard states. In which direction will the reaction proceed?


103. Consider the reaction:



Each of the entries in the table represents equilibrium partial pressures of A and B under different initial conditions. What are the values of a and b in the reaction?

P_A (atm)	P_B (atm)
4.0	2.0
2.0	1.4
1.0	1.0
0.50	0.71
0.25	0.50

104. Consider the simple one-step reaction:



Since the reaction occurs in a single step, the forward reaction has a rate of $k_{\text{for}}[\text{A}]$ and the reverse reaction has a rate of $k_{\text{rev}}[\text{B}]$. What happens to the rate of the forward reaction when we increase the concentration of A? How does this explain the reason behind Le Châtelier's principle?

QUESTIONS FOR GROUP WORK

Discuss these questions with the group and record your consensus answer.

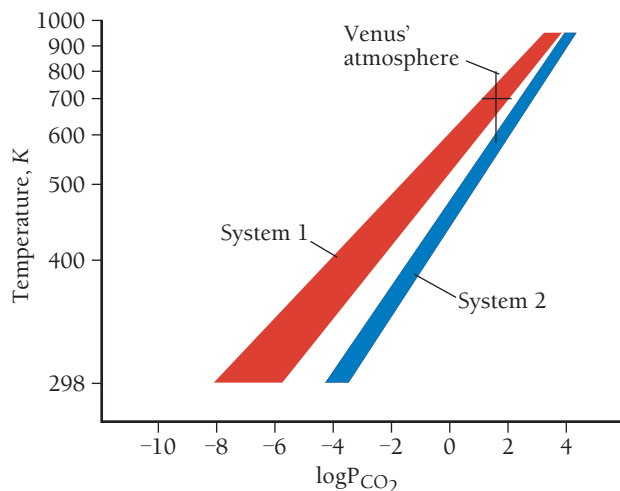
105. The reactions shown here can be combined to sum to the overall reaction $\text{C(s)} + \text{H}_2\text{O(g)} \longrightarrow \text{CO(g)} + \text{H}_2\text{(g)}$ by reversing some and/or dividing all the coefficients by a number. As a group, determine how the reactions need to be modified to sum to the overall process. Then have each group member determine the value of K for one of the reactions to be combined. Finally, combine all the values of K to determine the value of K for the overall reaction.
- $\text{C(s)} + \text{O}_2\text{(g)} \longrightarrow \text{CO}_2\text{(g)} \quad K = 1.363 \times 10^{69}$
 - $2 \text{H}_2\text{(g)} + \text{O}_2\text{(g)} \longrightarrow 2 \text{H}_2\text{O(g)} \quad K = 1.389 \times 10^{80}$
 - $2 \text{CO(g)} + \text{O}_2\text{(g)} \longrightarrow 2 \text{CO}_2\text{(g)} \quad K = 1.477 \times 10^{90}$
106. Consider the reaction: $\text{N}_2\text{(g)} + 3 \text{H}_2\text{(g)} \longrightarrow 2 \text{NH}_3\text{(g)}$.
- Write the equilibrium constant expression for this reaction.
If some hydrogen is added, before the reaction shifts:
 - How will the numerator and denominator of the expression in part a compare to the value at equilibrium?
 - Will Q be larger or smaller than K ? Why?
 - Will the reaction have to shift forward or backward to retain equilibrium? Explain.
 - Are your answers for b–d consistent with Le Châtelier's principle? Explain.

107. For the reaction $\text{A} \longrightarrow \text{B}$, the ratio of products to reactants at equilibrium is always the same number, no matter how much A or B is initially present. Interestingly, in contrast, the ratio of products to reactants for the reaction $\text{C} \longrightarrow 2 \text{D}$ does depend on how much of C and D you have initially. Explain this observation. Which ratio is independent of the starting amounts of C and D? Answer in complete sentences.
108. Solve each of the expressions for x using the quadratic formula and the x is *small* approximation. In which of the following expressions is the x is *small* approximation valid?
- $x^2/(0.2 - x) = 1.3 \times 10^4$
 - $x^2/(0.2 - x) = 1.3$
 - $x^2/(0.2 - x) = 1.3 \times 10^{-4}$
 - $x^2/(0.01 - x) = 1.3 \times 10^{-4}$
- In a complete sentence, describe the factor(s) that tend to make the x is *small* approximation valid in an expression.
109. Have each group member explain to the group what happens if a system at equilibrium is subject to one of the following changes and why.
- The concentration of a reactant is increased.
 - A solid product is added.
 - The volume is decreased.
 - The temperature is raised.

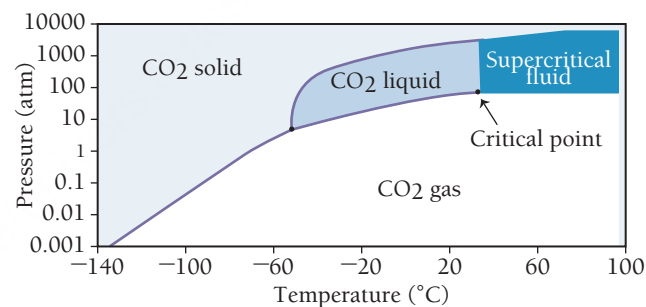
DATA INTERPRETATION AND ANALYSIS

110. The atmosphere of the planet Venus is almost entirely composed of carbon dioxide (about 96.5% carbon dioxide). The carbon dioxide on Venus could be in equilibrium with carbonate ions in minerals on the planet's crust. Two possible equilibrium systems involve CaSiO_3 and MgSiO_3 :
- $$\text{CaSiO}_3\text{(s)} + \text{CO}_2\text{(g)} \rightleftharpoons \text{CaCO}_3\text{(s)} + \text{SiO}_2\text{(s)} \quad \text{System 1}$$
- $$\text{MgSiO}_3\text{(s)} + \text{CaCO}_3\text{(s)} + \text{SiO}_2\text{(s)} \rightleftharpoons \text{CaMgSi}_2\text{O}_6\text{(s)} + \text{CO}_2\text{(g)} \quad \text{System 2}$$

The first graph that follows shows the expected pressures of carbon dioxide (in atm) at different temperatures for each of these equilibrium systems. (Note that both axes on this graph are logarithmic.) The second graph is a phase diagram for carbon dioxide. Examine the graphs and answer the questions.



▲ Carbon Dioxide Concentrations for Equilibrium Systems 1 and 2



▲ Carbon Dioxide Phase Diagram

- The partial pressure of carbon dioxide on the surface of Venus is 91 atm. What is the value of the equilibrium constant (K_p) if the Venusian carbon dioxide is in equilibrium according to system 1? According to system 2?
- The approximate temperature on the surface of Venus is about 740 K. What is the approximate carbon dioxide concentration for system 1 at this temperature? For system 2? (Use a point at approximately the middle of each colored band, which represents the range of possible values, to estimate the carbon dioxide concentration.)
- Use the partial pressure of carbon dioxide on the surface of Venus given in part a to determine which of the two equilibrium systems is more likely to be responsible for the carbon dioxide on the surface of Venus.
- From the carbon dioxide phase diagram, determine the minimum pressure required for supercritical carbon dioxide to form. If the partial pressure of carbon dioxide on the surface of Venus was higher in the distant past, could supercritical carbon dioxide have existed on the surface of Venus?

ANSWERS TO CONCEPTUAL CONNECTIONS

Cc 15.1 (b) The reaction mixture will contain $[A] = 0.1 \text{ M}$ and $[B] = 1.0 \text{ M}$ so that $[B]/[A] = 10$.

Cc 15.2 (b) The reaction is reversed and divided by two. Therefore, you invert the equilibrium constant and take the square root of the result. $K = (1/0.010)^{1/2} = 10$.

Cc 15.3 (a) When $a + b = c + d$, the quantity Δn is zero so that $K_p = K_c(RT)^0$. Since $(RT)^0$ is equal to 1, $K_p = K_c$.

Cc 15.4 (b) Since Δn for gaseous reactants and products is zero, K_p equals K_c .

Cc 15.5 (c) Because N_2O_4 and NO_2 are both in their standard states, they each have a partial pressure of 1.0 atm. Consequently, $Q_p = 1$. Since $K_p = 0.15$, $Q_p > K_p$, and the reaction proceeds to the left.

Cc 15.6 (a) The x is *small* approximation is most likely to apply to a reaction with a small equilibrium constant and an initial concentration of reactant that is not too small. The bigger the equilibrium constant and the smaller the initial concentration of reactant, the less likely that the x is *small* approximation will apply.

16.1 Batman's Basic Blunder 685

16.2 The Nature of Acids and Bases 686

16.3 Definitions of Acids and Bases 688

16.4 Acid Strength and Molecular Structure 691

16.5 Acid Strength and the Acid Ionization Constant (K_a) 693

16.6 Autoionization of Water and pH 696

16.7 Finding the $[H_3O^+]$ and pH of Strong and Weak Acid Solutions 700

16.8 Finding the $[OH^-]$ and pH of Strong and Weak Base Solutions 710

16.9 The Acid–Base Properties of Ions and Salts 713

16.10 Polyprotic Acids 720

16.11 Lewis Acids and Bases 725

Key Learning Outcomes 728



Batman neutralizes acid with base (a strategy he learned in his chemistry class).

Acids and Bases

I**N THIS CHAPTER**, we apply the equilibrium concepts introduced in the previous chapter to acid–base phenomena. Acids are common in many foods, such as limes, lemons, and vinegar, and in a number of consumer products, such as toilet cleaners and batteries. Bases are less common in foods but are key ingredients in consumer products such as drain openers and antacids. We will examine three different models for acid–base behavior, all of which define that behavior differently. In spite of their differences, the three models coexist, and each is useful at explaining a particular range of acid–base phenomena. We also examine how to calculate the acidity or basicity of solutions and define a useful scale, called the pH scale, to quantify acidity and basicity. These types of calculations often involve solving the kind of equilibrium problems that we explored in Chapter 15.

“We frequently define an acid or a base as a substance whose aqueous solution gives, respectively, a higher concentration of hydrogen ion or of hydroxide ion than that furnished by pure water. This is a very one-sided definition.”

—Gilbert N. Lewis (1875–1946)

16.1 Batman's Basic Blunder

In an episode of the Batman comic book series (*War Crimes 4: Judgement at Gotham*), the Joker attacks another villain named Black Mask (who is masquerading as Batman) with an acid-filled dart. The acid begins to chemically burn into Black Mask's head, but the real Batman arrives on the scene and showers Black Mask with a base, saving him. Batman tells Black Mask that he will be fine because the base neutralizes the acid.

Did Batman take the right action in counteracting the acid dart? Presumably the acid used by the Joker was fairly concentrated; otherwise it would not have begun to burn into Black Mask's head. It is true that a concentrated base would neutralize the acid in the dart. However, the concentrated base would likely cause further problems for two reasons. First, the neutralization reaction between a concentrated acid and a concentrated base is highly exothermic, so Batman's treatment is likely to have produced a significant amount of heat, leading to thermal burns (from the heat) for Black Mask. Second, concentrated bases are themselves caustic to the skin, so Batman's base has the potential to cause further additional chemical burns as well. The standard treatment for spilling concentrated acid on the skin is to rinse with large

amounts of water for an extended period of time. The water dilutes the acid and washes it away. Black Mask would have been better off with a shower.

In this chapter, we examine acid and base behavior. Acids and bases are found in many household products, foods, medicines, and in nearly every chemistry laboratory. Acid–base chemistry is central to much of biochemistry and molecular biology. The building blocks of proteins, for example, are acids (called amino acids), and the molecules that carry the genetic code in DNA are bases.

16.2 The Nature of Acids and Bases

Litmus paper contains certain dyes that change color in the presence of acids and bases.

For a review of acid naming, see Section 8.7.

The formula for acetic acid can also be written as CH₃COOH.

Acids have the following general properties: a sour taste; the ability to dissolve many metals; the ability to turn blue litmus paper red; and the ability to neutralize bases. We look more closely at the structural characteristics of acids that lead to this behavior in Section 16.4, but first let’s consider the common examples of acids listed in Table 16.1.

Hydrochloric acid is found in most chemistry laboratories. In industry, it is used to clean metals, to prepare and process some foods, and to refine metal ores. Hydrochloric acid is also the main component of stomach acid, which is why heartburn results in a sour taste (the sour taste occurs when HCl backs up out of the stomach and into the throat and mouth).


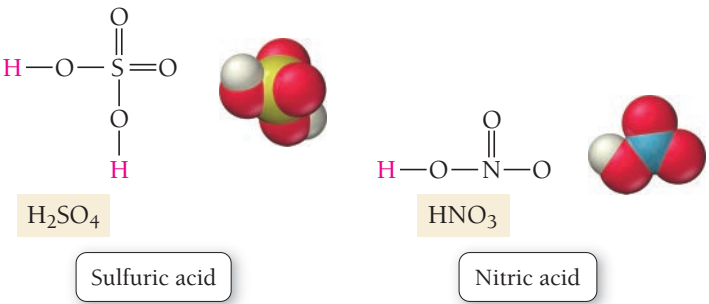


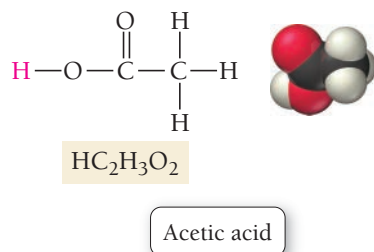
TABLE 16.1 Common Acids

Name	Occurrence/Uses
Hydrochloric acid (HCl)	Metal cleaning; food preparation; ore refining; primary component of stomach acid
Sulfuric acid (H ₂ SO ₄)	Fertilizer and explosives manufacturing; dye and glue production; automobile batteries; electroplating of copper
Nitric acid (HNO ₃)	Fertilizer and explosives manufacturing; dye and glue production
Acetic acid (HC ₂ H ₃ O ₂)	Plastic and rubber manufacturing; food preservation; active component of vinegar
Citric acid (H ₃ C ₆ H ₅ O ₇)	In citrus fruits such as lemons and limes; used to adjust pH in foods and beverages
Carbonic acid (H ₂ CO ₃)	In carbonated beverages due to the reaction of carbon dioxide with water
Hydrofluoric acid (HF)	Metal cleaning; glass frosting and etching
Phosphoric acid (H ₃ PO ₄)	Fertilizer manufacturing; biological buffering; beverage preservation

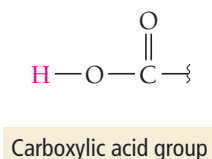
Sulfuric acid and nitric acid are also common in the laboratory. They are important in the manufacture of fertilizers, explosives, dyes, and glues. Sulfuric acid, produced in larger quantities than any other industrial chemical, is present in most automobile batteries.



You can probably find acetic acid in your home—it is the active component of vinegar. It is also produced in improperly stored wines. The word “vinegar” originates from the French words *vin aigre*, which means sour wine. Wine experts consider the presence of vinegar in wines a serious fault because it makes the wine taste like salad dressing.



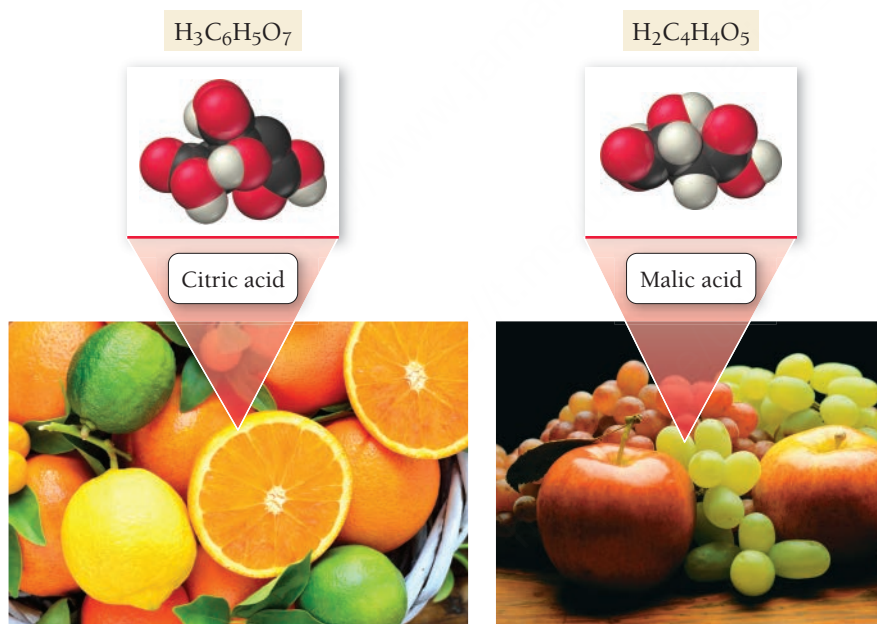
Acetic acid is a **carboxylic acid**, an acid that contains the following grouping of atoms:



Carboxylic acids are often found in substances derived from living organisms. Other examples of carboxylic acids are citric acid, the main acid in lemons and limes, and malic acid, found in apples, grapes, and wine.



▲ Acetic acid makes vinegar taste sour.



▲ Citrus fruits, apples, and grapes all contain acids.

Bases have the following general properties: a bitter taste; a slippery feel; the ability to turn red litmus paper blue; and the ability to neutralize acids. Because of their bitterness, bases are less common in foods than are acids. Our aversion to the taste of bases is probably an evolutionary adaptation to warn us against **alkaloids**, organic bases found in plants that are often poisonous. (For example, the active component of hemlock—the poisonous plant that killed the Greek philosopher Socrates—is the alkaloid coniine.) Nonetheless, some foods, such as coffee and chocolate (especially dark chocolate), contain bitter flavors. Many people enjoy the bitterness but only after acquiring the taste over time.

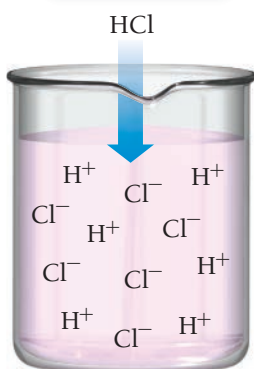
Bases feel slippery because they react with oils on the skin to form soap-like substances. Some household cleaning solutions, such as ammonia, are basic and have the characteristic slippery feel of a base. Bases turn red litmus paper blue; in the laboratory, we use litmus paper to test the basicity of solutions.



▲ Many common household products and remedies contain bases.

PEARSON
eText
2.0
KEY CONCEPT VIDEO
Definitions of Acids
and Bases

Arrhenius acid



▲ **FIGURE 16.1 Arrhenius Acid**
An Arrhenius acid produces H^+ ions in solution.

Single arrow indicates complete ionization.



Strong acid

Double arrow indicates partial ionization.



Weak acid

TABLE 16.2 Common Bases

Name	Occurrence/Uses
Sodium hydroxide (NaOH)	Petroleum processing; soap and plastic manufacturing
Potassium hydroxide (KOH)	Cotton processing; electroplating; soap production; batteries
Sodium bicarbonate (NaHCO_3)	Sold as baking soda; antacid; source of CO_2
Sodium carbonate (Na_2CO_3)	Glass and soap manufacturing; general cleanser; water softener
Ammonia (NH_3)	Detergent; fertilizer and explosives manufacturing; synthetic fiber production

Table 16.2 lists some common bases. You can find sodium hydroxide and potassium hydroxide in most chemistry laboratories. They are used in petroleum and cotton processing, as well as in soap and plastic manufacturing. Sodium hydroxide is the active ingredient in products such as Drano® that unclog drains. In many homes, you can find sodium bicarbonate in the medicine cabinet (it is an active ingredient in some antacids) as well as in the kitchen (labeled as baking soda).

16.3 Definitions of Acids and Bases

In this section, we examine two different definitions of acids and bases: the Arrhenius definition and the Brønsted–Lowry definition (later in the chapter we examine a third one called the Lewis definition). Why three definitions, and which one is correct? As Lewis himself noted in the opening quote of this chapter, each definition has limits, and no single definition is “correct.” Rather, each definition is useful in a given instance.

The Arrhenius Definition

In the 1880s, Swedish chemist Svante Arrhenius (1859–1927) proposed the following molecular definitions of acids and bases:

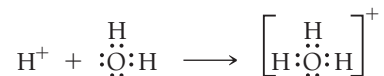
Acid—A substance that produces H^+ ions in aqueous solution

Base—A substance that produces OH^- ions in aqueous solution

According to the **Arrhenius definition**, HCl is an acid because it produces H^+ ions in solution (**Figure 16.1** ◀).



Hydrogen monochloride (HCl) is a covalent compound and does not contain ions. However, in water it ionizes completely to form $\text{H}^+(aq)$ ions and $\text{Cl}^-(aq)$ ions. The H^+ ions are highly reactive. In aqueous solution, the ions bond to water to form H_3O^+ :




The H_3O^+ ion is called the **hydronium ion**. In water, H^+ ions always associate with H_2O molecules to form hydronium ions and other associated species with the general formula $\text{H}(\text{H}_2\text{O})_n^+$. For example, an H^+ ion can associate with two water molecules to form $\text{H}(\text{H}_2\text{O})_2^+$, with three to form $\text{H}(\text{H}_2\text{O})_3^+$, and so on. Chemists use $\text{H}^+(aq)$ and $\text{H}_3\text{O}^+(aq)$ interchangeably to mean the same thing—an H^+ ion that has been solvated (or dissolved) in water.

Recall from Section 9.4 that the strength of an electrolyte (a substance, such as an acid, that forms ions in solution) depends on the extent of the electrolyte’s dissociation into its component ions in solution. A **strong electrolyte** completely dissociates into ions in solution, whereas a **weak electrolyte** only partially dissociates. We define strong and weak acids accordingly. A **strong acid** completely ionizes in solution, whereas a **weak acid** only partially ionizes. We represent the ionization of a strong acid with a single arrow and that of a weak acid with an equilibrium arrow (see margin). In this notation, HA represents a generic acid with the anion A^- .

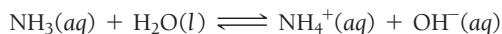
According to the Arrhenius definition, NaOH is a base because it produces OH^- ions in solution (**Figure 16.2** ▶).



NaOH is an ionic compound and therefore contains Na^+ and OH^- ions. When NaOH is added to water, it *dissociates* or breaks apart into its component ions. NaOH is an example of a **strong base**, one that completely dissociates in solution (analogous to a strong acid). A **weak base** is analogous to a weak acid. Unlike strong bases that contain OH^- and *dissociate* in water, the most common weak bases produce OH^- by accepting a proton from water and ionizing water to form OH^- according to the general equation:

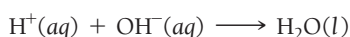


In this equation, B is a generic symbol for a weak base. Ammonia, for example, ionizes water as follows:



We examine weak bases more thoroughly in Section 16.8.

Under the Arrhenius definition, acids and bases combine to form water, neutralizing each other in the process:



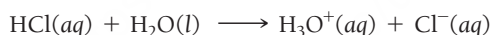
The Brønsted–Lowry Definition

A second, more widely applicable definition of acids and bases, called the **Brønsted–Lowry definition**, was introduced in 1923. This definition focuses on the *transfer of H^+ ions* in an acid–base reaction. Since an H^+ ion is a proton—a hydrogen atom without its electron—this definition focuses on the idea of a proton donor and a proton acceptor:

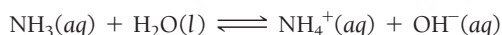
Acid—Proton (H^+ ion) *donor*

Base—Proton (H^+ ion) *acceptor*

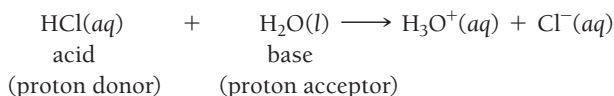
According to this definition, HCl is an acid because, in solution, it donates a proton to water:



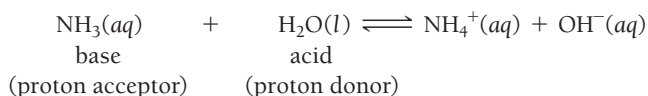
This definition clearly describes what happens to the H^+ ion from an acid—it associates with a water molecule to form H_3O^+ (a hydronium ion). The Brønsted–Lowry definition also applies nicely to bases (such as NH_3) that do not inherently contain OH^- ions but still produce OH^- ions in solution. According to the Brønsted–Lowry definition, NH_3 is a base because it accepts a proton from water:



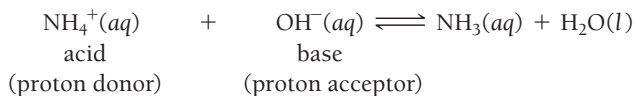
According to the Brønsted–Lowry definition, acids (proton donors) and bases (proton acceptors) always occur together. In the reaction between HCl and H_2O , HCl is the proton donor (acid) and H_2O is the proton acceptor (base):



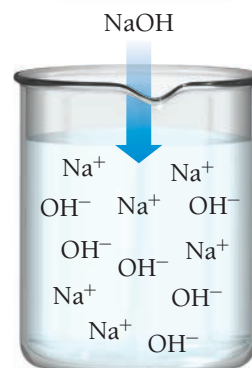
In the reaction between NH_3 and H_2O , H_2O is the proton donor (acid) and NH_3 is the proton acceptor (base):



According to the Brønsted–Lowry definition, some substances—such as water in the previous two equations—can act as acids or bases. Substances that can act as acids or bases are **amphoteric**. Notice what happens when we reverse an equation representing Brønsted–Lowry acid–base behavior:



Arrhenius base

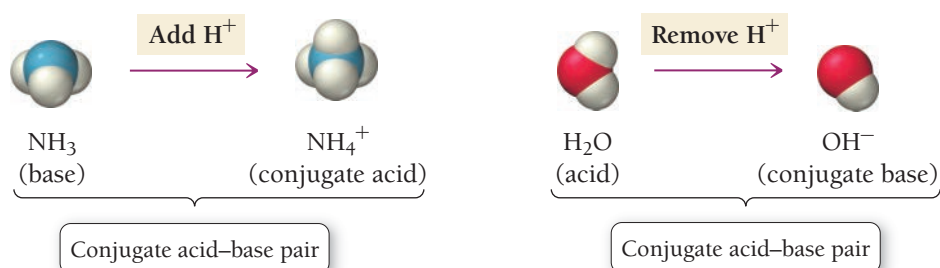


▲ FIGURE 16.2 Arrhenius Base

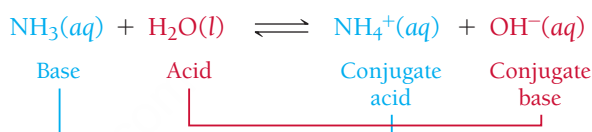
An Arrhenius base produces OH^- ions in solution.

All Arrhenius acids and bases are acids and bases under the Brønsted–Lowry definition. However, some Brønsted–Lowry acids and bases cannot be classified as Arrhenius acids and bases.

► **FIGURE 16.3 Conjugate Acid–Base Pairs** A conjugate acid–base pair consists of two substances related to each other by the transfer of a proton.



In this reaction, NH_4^+ is the proton donor (acid) and OH^- is the proton acceptor (base). The substance that was the base (NH_3) has become the acid (NH_4^+) and vice versa. NH_4^+ and NH_3 are often referred to as a **conjugate acid–base pair**, two substances related to each other by the transfer of a proton (**Figure 16.3** ▲). A **conjugate acid** is any base to which a proton has been added, and a **conjugate base** is any acid from which a proton has been removed. Going back to the original forward reaction, we can identify the conjugate acid–base pairs:



Summarizing the Brønsted–Lowry Definition of an Acid–Base Reaction:

- A base accepts a proton and becomes a conjugate acid.
- An acid donates a proton and becomes a conjugate base.

EXAMPLE 16.1

Identifying Brønsted–Lowry Acids and Bases and Their Conjugates

Interactive
Worked Example
Video 16.1

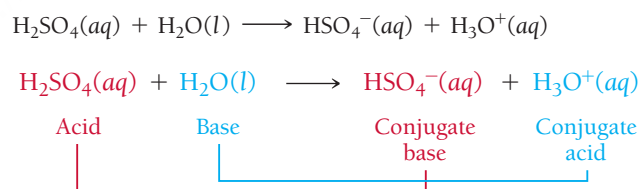
PEARSON
eText
2.0

In each reaction, identify the Brønsted–Lowry acid, the Brønsted–Lowry base, the conjugate acid, and the conjugate base.

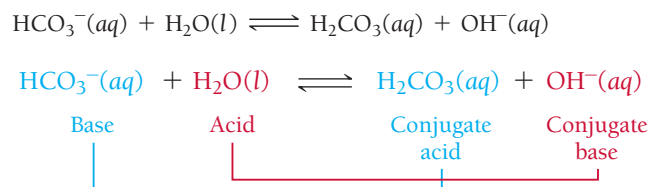
- (a) $\text{H}_2\text{SO}_4(\text{aq}) + \text{H}_2\text{O}(\text{l}) \longrightarrow \text{HSO}_4^-(\text{aq}) + \text{H}_3\text{O}^+(\text{aq})$
 (b) $\text{HCO}_3^-(\text{aq}) + \text{H}_2\text{O}(\text{l}) \rightleftharpoons \text{H}_2\text{CO}_3(\text{aq}) + \text{OH}^-(\text{aq})$

SOLUTION

- (a) Because H_2SO_4 donates a proton to H_2O in this reaction, it is the acid (proton donor). After H_2SO_4 donates the proton, it becomes HSO_4^- , the conjugate base. Because H_2O accepts a proton, it is the base (proton acceptor). After H_2O accepts the proton, it becomes H_3O^+ , the conjugate acid.



- (b) Because H_2O donates a proton to HCO_3^- in this reaction, it is the acid (proton donor). After H_2O donates the proton, it becomes OH^- , the conjugate base. Because HCO_3^- accepts a proton, it is the base (proton acceptor). After HCO_3^- accepts the proton, it becomes H_2CO_3 , the conjugate acid.



FOR PRACTICE 16.1

In each reaction, identify the Brønsted–Lowry acid, the Brønsted–Lowry base, the conjugate acid, and the conjugate base.

- (a) $\text{C}_5\text{H}_5\text{N}(\text{aq}) + \text{H}_2\text{O}(\text{l}) \rightleftharpoons \text{C}_5\text{H}_5\text{NH}^+(\text{aq}) + \text{OH}^-(\text{aq})$
 (b) $\text{HNO}_3(\text{aq}) + \text{H}_2\text{O}(\text{l}) \rightleftharpoons \text{H}_3\text{O}^+(\text{aq}) + \text{NO}_3^-(\text{aq})$

Conjugate Acid–Base Pairs

16.1

Cc

Conceptual
Connection

Which pair is not a conjugate acid–base pair?

- (a) $(\text{CH}_3)_3\text{N}; (\text{CH}_3)_3\text{NH}^+$ (b) $\text{H}_2\text{SO}_4; \text{H}_2\text{SO}_3$ (c) $\text{HNO}_2; \text{NO}_2^-$

16.4 Acid Strength and Molecular Structure

We have learned that a Brønsted–Lowry acid is a proton $[\text{H}^+]$ donor. Now we explore why some hydrogen-containing molecules act as proton donors while others do not. In other words, we explore *how the structure of a molecule affects its acidity*. Why is H_2S acidic while CH_4 is not? Or why is HF a weak acid while HCl is a strong acid? We divide our discussion about these issues into two categories: binary acids (those containing hydrogen and only one other element) and oxyacids (those containing hydrogen bonded to an oxygen atom that is bonded to another element).

Binary Acids

Consider the bond between a hydrogen atom and some other generic element (which we will call Y):



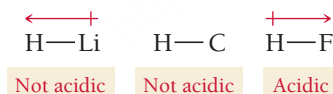
The factors affecting the ease with which this hydrogen is donated (and therefore acidic) are the *polarity* of the bond and the *strength* of the bond.

Bond Polarity In order for HY to be acidic, the $\text{H}—\text{Y}$ bond must be polarized with the hydrogen atom as the positive pole. Recall from Chapter 5 that we indicate bond polarity using the following notation:



This requirement makes physical sense because the hydrogen atom must be lost from the acid as a positively charged ion (H^+). A partial positive charge on the hydrogen atom facilitates its loss.

Consider the following three bonds and their corresponding dipole moments:



LiH is ionic with *the negative charge on the hydrogen atom*; therefore, LiH is not acidic. The $\text{C}—\text{H}$ bond is virtually nonpolar because the electronegativities of carbon and hydrogen are similar; therefore, $\text{C}—\text{H}$ is not acidic. In contrast, the $\text{H}—\text{F}$ bond is polar with the positive charge on the hydrogen atom. HF is an acid. This is because the partial positive charge on the hydrogen atom makes it easier for the hydrogen to be lost as an H^+ ion.

Bond Strength The strength of the $\text{H}—\text{Y}$ bond also affects the strength of the corresponding acid. As you might expect, the stronger the bond, the weaker the acid. The more tightly the hydrogen atom is held, the less likely it is to come off. We can see the effect of bond strength by comparing the bond strengths and acidities of the hydrogen halides:

Acid	Bond Energy (kJ/mol)	Acid Strength
$\text{H}—\text{F}$	565	Weak
$\text{H}—\text{Cl}$	431	Strong
$\text{H}—\text{Br}$	364	Strong

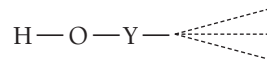
HCl and HBr have weaker bonds and are both strong acids. HF, in contrast, has a stronger bond and is therefore a weak acid, despite the greater bond polarity of HF. Other factors also affect acid strength, but they are beyond the scope of this book.

The Combined Effect of Bond Polarity and Bond Strength We can see the combined effect of bond polarity and bond strength by examining the trends in acidity of the group 6A and 7A hydrides illustrated in **Figure 16.4** ▼. The hydrides become more acidic from left to right as the H—Y bond becomes more polar. The hydrides also become more acidic from top to bottom as the H—Y bond becomes weaker.

Oxyacids are sometimes called oxoacids.

Oxyacids

Oxyacids contain a hydrogen atom bonded to an oxygen atom. The oxygen atom is in turn bonded to another atom (which we will call Y):



Y may or may not be bonded to additional atoms. The ease with which the H is donated is related to the strength and polarity of the H—O bond (as was noted before). The factors affecting the strength and polarity of the bond are the *electronegativity of the element Y* and the *number of oxygen atoms attached to the element Y*.

The Electronegativity of Y The more electronegative the element Y is, the more it weakens and polarizes the H—O bond and the more acidic the oxyacid is. We can see this effect by comparing the electronegativity of Y and the relative strengths of the following weak oxyacids:

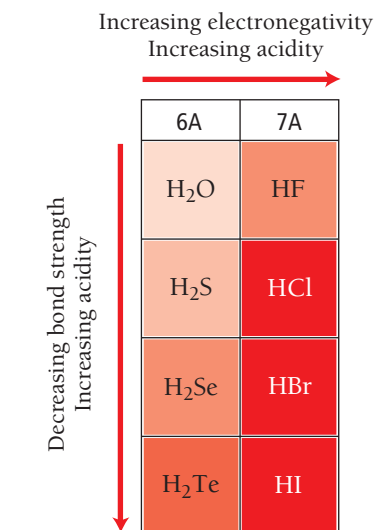
Acid	Electronegativity of Y	Acid Strength
$\text{H} - \text{O} - \text{I}$	2.5	Weakest
$\text{H} - \text{O} - \text{Br}$	2.8	Weaker
$\text{H} - \text{O} - \text{Cl}$	3.0	Weak

Chlorine is the most electronegative of the three elements, and the corresponding acid is the least weak of these three weak acids.

The Number of Oxygen Atoms Bonded to Y Oxyacids may contain additional oxygen atoms bonded to the element Y. Because these additional oxygen atoms are electronegative, they draw electron density away from Y, which in turn draws electron density away from the H—O bond, further weakening and polarizing it, and leading to increasing acidity. We can see this effect by comparing the relative strengths of the following series of acids:

Acid	Structure	Acid Strength
HClO_4	$\begin{array}{c} \text{O} \\ \\ \text{H} - \text{O} - \text{Cl} = \text{O} \\ \\ \text{O} \end{array}$	Strong
HClO_3	$\begin{array}{c} \text{O} \\ \\ \text{H} - \text{O} - \text{Cl} = \text{O} \end{array}$	Weak
HClO	$\text{H} - \text{O} - \text{Cl}$	Very Weak

The greater the number of oxygen atoms bonded to Y, the stronger the acid. On this basis, we would predict that H_2SO_4 is a stronger acid than H_2SO_3 and that HNO_3 is stronger than HNO_2 . In both cases, our predictions are correct. Both H_2SO_4 and HNO_3 are strong acids, while H_2SO_3 and HNO_2 are weak acids.



▲ **FIGURE 16.4 Acidity of the Group 6A and 7A Hydrides** From left to right, the hydrides become more acidic because the H—Y bond becomes more polar. From top to bottom, these hydrides become more acidic because the H—Y bond becomes weaker.

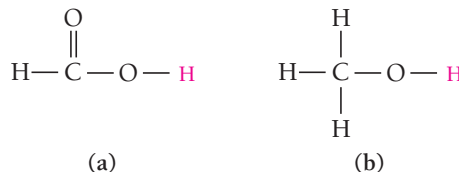
Acid Strength and Molecular Structure

16.2

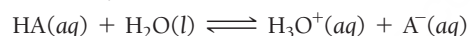
Cc

Conceptual
Connection

Which of the protons shown in red is more acidic?

16.5 Acid Strength and the Acid Ionization Constant (K_a)

We have seen that, depending on the structure of an acid, it can be either strong (in which case it completely ionizes in solution) or weak (in which case it only partially ionizes in solution). We can think of acid strength in terms of the equilibrium concepts we discussed in Chapter 15. For the generic acid HA, we can write the following ionization equation:



If the equilibrium lies far to the right, the acid is strong. If the equilibrium lies to the left, the acid is weak. The range of acid strength is continuous, but for most purposes, the categories of strong and weak are useful.

Strong Acids

Hydrochloric acid (HCl) is an example of a strong acid. An HCl solution contains virtually no intact HCl; the HCl has essentially all ionized to form $\text{H}_3\text{O}^+(aq)$ and $\text{Cl}^-(aq)$ (**Figure 16.5** ▼). If we have a HCl solution with an H_3O^+ concentration of 1.0 M, abbreviating the concentration of H_3O^+ as $[\text{H}_3\text{O}^+]$, we say that the 1.0 M HCl solution has $[\text{H}_3\text{O}^+] = 1.0 \text{ M}$.

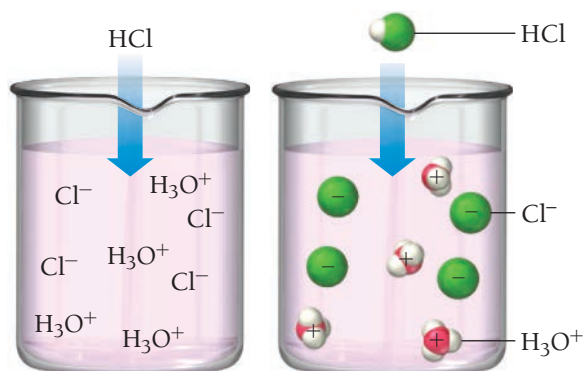
Table 16.3 lists the six important strong acids. The first five acids in the table are **monoprotic acids**, acids containing only one ionizable proton. Sulfuric acid is an example of a **diprotic acid**, an acid containing two ionizable protons.

TABLE 16.3 Strong Acids

Hydrochloric acid (HCl)	Nitric acid (HNO ₃)
Hydrobromic acid (HBr)	Perchloric acid (HClO ₄)
Hydriodic acid (HI)	Sulfuric acid (H ₂ SO ₄) (diprotic)

An ionizable proton is one that ionizes in solution. We discuss polyprotic acids in more detail in Section 16.10.

A Strong Acid



When HCl dissolves in water, it ionizes completely.

◀ **FIGURE 16.5 Ionization of a Strong Acid** When HCl dissolves in water, it completely ionizes to form H_3O^+ and Cl^- . The solution contains virtually no intact HCl.

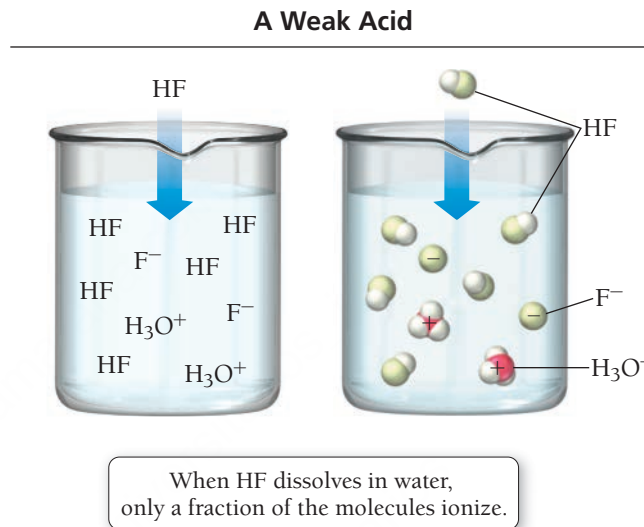
Weak Acids

In contrast to HCl, HF is a weak acid, one that does not completely ionize in solution. As we saw in Section 16.4, the strength of the HF bond relative to the HCl bond makes HF less likely to ionize in solution than HCl. Therefore, an HF solution contains a large number of intact (or un-ionized) HF molecules; it also contains some $\text{H}_3\text{O}^+(\text{aq})$ and $\text{F}^-(\text{aq})$ (**Figure 16.6 ▼**). In other words, a 1.0 M HF solution has $[\text{H}_3\text{O}^+]$ that is much lower than 1.0 M because only some of the HF molecules ionize to form H_3O^+ . Table 16.4 lists some other common weak acids.

Notice that two of the weak acids in Table 16.4 are diprotic, meaning that they have two ionizable protons, and one is **triprotic** (three ionizable protons). We discuss polyprotic acids in more detail in Section 16.10.

► FIGURE 16.6 Ionization of a Weak Acid

When HF dissolves in water, only a fraction of the dissolved molecules ionize to form H_3O^+ and F^- . The solution contains many intact HF molecules.



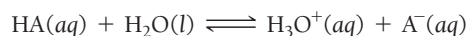
We can also write the formulas for acetic acid and formic acid as CH_3COOH and HCOOH , respectively, to indicate that in these compounds the only H that ionizes is the one attached to an oxygen atom.

TABLE 16.4 Common Weak Acids

Hydrofluoric acid (HF)	Sulfurous acid (H_2SO_3) (<i>diprotic</i>)
Acetic acid ($\text{HC}_2\text{H}_3\text{O}_2$)	Carbonic acid (H_2CO_3) (<i>diprotic</i>)
Formic acid (HCHO_2)	Phosphoric acid (H_3PO_4) (<i>triprotic</i>)

The Acid Ionization Constant (K_a)

We quantify the relative strength of a weak acid with the **acid ionization constant** (K_a), which is the equilibrium constant for the ionization reaction of the weak acid in water. Based on the law of mass action (see Section 15.3) for the two equivalent reactions:



The equilibrium constant is:

$$K_a = \frac{[\text{H}_3\text{O}^+][\text{A}^-]}{[\text{HA}]} = \frac{[\text{H}^+][\text{A}^-]}{[\text{HA}]}$$

Since $[\text{H}_3\text{O}^+]$ is equivalent to $[\text{H}^+]$, both forms of the above expression are equal. Although the ionization constants for all weak acids are relatively small (otherwise the acid would not be a weak acid), they do vary in magnitude. The smaller the constant, the less the acid ionizes, and the weaker the acid. Table 16.5 lists the acid ionization constants for a number of common weak acids in order of decreasing acid strength.

The terms *strong* and *weak* acids are often confused with the terms *concentrated* and *dilute* acids. Can you articulate the difference between these terms?

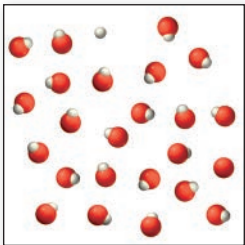
Recall from Chapter 15 that the concentrations of pure solids or pure liquids are not included in the expression for K_c . Therefore, $\text{H}_2\text{O}(\text{l})$ is not included in the expression for K_a .

TABLE 16.5 Acid Ionization Constants (K_a) for Some Monoprotic Weak Acids at 25 °C


Acid	Formula	Structural Formula	Ionization Reaction	K_a	pK_a
Chlorous acid	HClO_2	$\text{H}-\text{O}-\text{Cl}=\text{O}$	$\text{HClO}_2(\text{aq}) + \text{H}_2\text{O}(\text{l}) \rightleftharpoons \text{H}_3\text{O}^+(\text{aq}) + \text{ClO}_2^-(\text{aq})$	1.1×10^{-2}	1.96
Nitrous acid	HNO_2	$\text{H}-\text{O}-\text{N}=\text{O}$	$\text{HNO}_2(\text{aq}) + \text{H}_2\text{O}(\text{l}) \rightleftharpoons \text{H}_3\text{O}^+(\text{aq}) + \text{NO}_2^-(\text{aq})$	4.6×10^{-4}	3.34
Hydrofluoric acid	HF	$\text{H}-\text{F}$	$\text{HF}(\text{aq}) + \text{H}_2\text{O}(\text{l}) \rightleftharpoons \text{H}_3\text{O}^+(\text{aq}) + \text{F}^-(\text{aq})$	6.8×10^{-4}	3.17
Formic acid	HCHO_2	$\text{H}-\text{O}-\overset{\overset{\text{O}}{\parallel}}{\text{C}}-\text{H}$	$\text{HCHO}_2(\text{aq}) + \text{H}_2\text{O}(\text{l}) \rightleftharpoons \text{H}_3\text{O}^+(\text{aq}) + \text{CHO}_2^-(\text{aq})$	1.8×10^{-4}	3.74
Benzoic acid	$\text{HC}_7\text{H}_5\text{O}_2$	$\text{H}-\text{O}-\overset{\overset{\text{O}}{\parallel}}{\text{C}}-\text{C}_6\text{H}_5$	$\text{HC}_7\text{H}_5\text{O}_2(\text{aq}) + \text{H}_2\text{O}(\text{l}) \rightleftharpoons \text{H}_3\text{O}^+(\text{aq}) + \text{C}_7\text{H}_5\text{O}_2^-(\text{aq})$	6.5×10^{-5}	4.19
Acetic acid	$\text{HC}_2\text{H}_3\text{O}_2$	$\text{H}-\text{O}-\overset{\overset{\text{O}}{\parallel}}{\text{C}}-\text{CH}_3$	$\text{HC}_2\text{H}_3\text{O}_2(\text{aq}) + \text{H}_2\text{O}(\text{l}) \rightleftharpoons \text{H}_3\text{O}^+(\text{aq}) + \text{C}_2\text{H}_3\text{O}_2^-(\text{aq})$	1.8×10^{-5}	4.74
Hypochlorous acid	HClO	$\text{H}-\text{O}-\text{Cl}$	$\text{HClO}(\text{aq}) + \text{H}_2\text{O}(\text{l}) \rightleftharpoons \text{H}_3\text{O}^+(\text{aq}) + \text{ClO}^-(\text{aq})$	2.9×10^{-8}	7.54
Hydrocyanic acid	HCN	$\text{H}-\text{C}\equiv\text{N}$	$\text{HCN}(\text{aq}) + \text{H}_2\text{O}(\text{l}) \rightleftharpoons \text{H}_3\text{O}^+(\text{aq}) + \text{CN}^-(\text{aq})$	4.9×10^{-10}	9.31
Phenol	$\text{HC}_6\text{H}_5\text{O}$	$\text{HO}-\text{C}_6\text{H}_5$	$\text{HC}_6\text{H}_5\text{O}(\text{aq}) + \text{H}_2\text{O}(\text{l}) \rightleftharpoons \text{H}_3\text{O}^+(\text{aq}) + \text{C}_6\text{H}_5\text{O}^-(\text{aq})$	1.3×10^{-10}	9.89

The Magnitude of the Acid Ionization Constant


Consider the three generic weak acids HA, HB, and HC. The images shown here represent the ionization of each acid at room temperature. Which acid has the largest K_a ?



HA



HB



HC

16.3
Cc

Conceptual
Connection





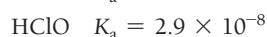
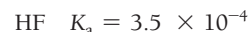
16.4

Cc

Conceptual
Connection

Relative Strengths of Weak Acids

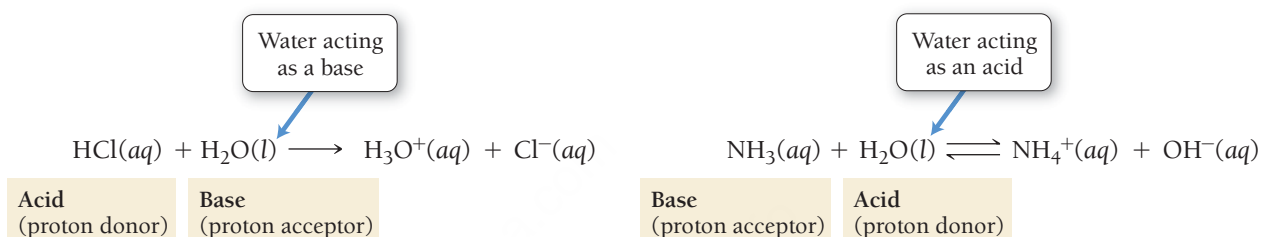
Consider these two acids and their K_a values.



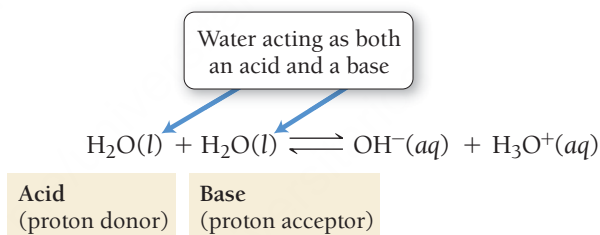
Which acid is stronger?

16.6 Autoionization of Water and pH

We saw previously that water acts as a base when it reacts with HCl and as an acid when it reacts with NH_3 :



Water is *amphoteric*; it can act as either an acid or a base. Even when pure, water acts as an acid and a base with itself, a process called **autoionization**:



We can also write the autoionization reaction as:



The equilibrium constant expression for this reaction is the product of the concentration of the two ions:

$$K_w = [\text{H}_3\text{O}^+][\text{OH}^-] = [\text{H}^+][\text{OH}^-]$$

This equilibrium constant is the **ion product constant for water (K_w)** (sometimes called the *dissociation constant for water*). At 25°C , $K_w = 1.0 \times 10^{-14}$. In pure water, since H_2O is the only source of these ions, the concentrations of H_3O^+ and OH^- are equal, and the solution is **neutral**. Since the concentrations of the two ions are equal, we can easily calculate them from K_w :

$$[\text{H}_3\text{O}^+] = [\text{OH}^-] = \sqrt{K_w} = 1.0 \times 10^{-7} \text{ (in pure water at } 25^\circ\text{C)}$$

As you can see, in pure water, the concentrations of H_3O^+ and OH^- are *very small* ($1.0 \times 10^{-7} \text{ M}$) at room temperature.

An **acidic solution** contains an acid that creates additional H_3O^+ ions, causing $[\text{H}_3\text{O}^+]$ to increase. However, the *ion product constant still applies*:

$$[\text{H}_3\text{O}^+][\text{OH}^-] = K_w = 1.0 \times 10^{-14}$$

The concentration of H_3O^+ times the concentration of OH^- is always 1.0×10^{-14} at 25°C . If $[\text{H}_3\text{O}^+]$ increases, then $[\text{OH}^-]$ must decrease for the ion product constant to remain 1.0×10^{-14} . For example, if $[\text{H}_3\text{O}^+] = 1.0 \times 10^{-3}$, we can find $[\text{OH}^-]$ by solving the ion product constant expression for $[\text{OH}^-]$:

$$\begin{aligned} (1.0 \times 10^{-3})[\text{OH}^-] &= 1.0 \times 10^{-14} \\ [\text{OH}^-] &= \frac{1.0 \times 10^{-14}}{1.0 \times 10^{-3}} = 1.0 \times 10^{-11} \text{ M} \end{aligned}$$

In an acidic solution, $[\text{H}_3\text{O}^+] > [\text{OH}^-]$.

A **basic solution** contains a base that creates additional OH[−] ions, causing [OH[−]] to increase and [H₃O⁺] to decrease, but again the *ion product constant still applies*. Suppose [OH[−]] = 1.0 × 10^{−2}; we can find [H₃O⁺] by solving the ion product constant expression for [H₃O⁺]:

$$\begin{aligned} [\text{H}_3\text{O}^+](1.0 \times 10^{-2}) &= 1.0 \times 10^{-14} \\ [\text{H}_3\text{O}^+] &= \frac{1.0 \times 10^{-14}}{1.0 \times 10^{-2}} = 1.0 \times 10^{-12} \text{ M} \end{aligned}$$

In a basic solution, [OH[−]] > [H₃O⁺].

Notice that changing [H₃O⁺] in an aqueous solution produces an inverse change in [OH[−]] and vice versa.

Summarizing K_w:

- A *neutral solution* contains [H₃O⁺] = [OH[−]] = 1.0 × 10^{−7} M (at 25°C).
- An *acidic solution* contains [H₃O⁺] > [OH[−]].
- A *basic solution* contains [OH[−]] > [H₃O⁺].
- In all aqueous solutions, both H₃O⁺ and OH[−] are present and [H₃O⁺][OH[−]] = K_w = 1.0 × 10^{−14} (at 25°C).

EXAMPLE 16.2

Using K_w in Calculations

Calculate [OH[−]] at 25°C for each solution and determine if the solution is acidic, basic, or neutral.

- (a) [H₃O⁺] = 7.5 × 10^{−5} M
- (b) [H₃O⁺] = 1.5 × 10^{−9} M
- (c) [H₃O⁺] = 1.0 × 10^{−7} M

SOLUTION

<p>(a) To find [OH[−]], use the ion product constant. Substitute the given value for [H₃O⁺] and solve the equation for [OH[−]].</p> <p>Since [H₃O⁺] > [OH[−]], the solution is acidic.</p>	$\begin{aligned} [\text{H}_3\text{O}^+][\text{OH}^-] &= K_w = 1.0 \times 10^{-14} \\ (7.5 \times 10^{-5}) [\text{OH}^-] &= 1.0 \times 10^{-14} \\ [\text{OH}^-] &= \frac{1.0 \times 10^{-14}}{7.5 \times 10^{-5}} = 1.3 \times 10^{-10} \text{ M} \end{aligned}$ <p>Acidic solution</p>
<p>(b) Substitute the given value for [H₃O⁺] and solve the acid ionization equation for [OH[−]].</p> <p>Since [H₃O⁺] < [OH[−]], the solution is basic.</p>	$\begin{aligned} (1.5 \times 10^{-9})[\text{OH}^-] &= 1.0 \times 10^{-14} \\ [\text{OH}^-] &= \frac{1.0 \times 10^{-14}}{1.5 \times 10^{-9}} = 6.7 \times 10^{-6} \text{ M} \end{aligned}$ <p>Basic solution</p>
<p>(c) Substitute the given value for [H₃O⁺] and solve the acid ionization equation for [OH[−]].</p> <p>Since [H₃O⁺] = 1.0 × 10^{−7} and [OH[−]] = 1.0 × 10^{−7}, the solution is neutral.</p>	$\begin{aligned} (1.0 \times 10^{-7}) [\text{OH}^-] &= 1.0 \times 10^{-14} \\ [\text{OH}^-] &= \frac{1.0 \times 10^{-14}}{1.0 \times 10^{-7}} = 1.0 \times 10^{-7} \text{ M} \end{aligned}$ <p>Neutral solution</p>

FOR PRACTICE 16.2

Calculate [H₃O⁺] at 25°C for each solution and determine if the solution is acidic, basic, or neutral.

- (a) [OH[−]] = 1.5 × 10^{−2} M
- (b) [OH[−]] = 1.0 × 10^{−7} M
- (c) [OH[−]] = 8.2 × 10^{−10} M

The log of a number is the exponent to which 10 must be raised to obtain that number. Thus, $\log 10^1 = 1$; $\log 10^2 = 2$; $\log 10^{-1} = -1$; $\log 10^{-2} = -2$, and so on (see Appendix I).

TABLE 16.6 The pH of Some Common Substances

Substance	pH
Gastric juice (human stomach)	1.0–3.0
Limes	1.8–2.0
Lemons	2.2–2.4
Soft drinks	2.0–4.0
Plums	2.8–3.0
Wines	2.8–3.8
Apples	2.9–3.3
Peaches	3.4–3.6
Cherries	3.2–4.0
Beers	4.0–5.0
Rainwater (unpolluted)	5.6
Human blood	7.3–7.4
Egg whites	7.6–8.0
Milk of Magnesia	10.5
Household ammonia	10.5–11.5
4% NaOH solution	14

Concentrated acid solutions can have a negative pH. For example, if $[\text{H}_3\text{O}^+] = 2.0 \text{ M}$, the pH is -0.30 .

Specifying the Acidity or Basicity of a Solution: The pH Scale

The pH scale is a compact way to specify the acidity of a solution. We define **pH** as the negative of the log of the hydronium ion concentration:

$$\text{pH} = -\log[\text{H}_3\text{O}^+]$$

A solution with $[\text{H}_3\text{O}^+] = 1.0 \times 10^{-3} \text{ M}$ (acidic) has a pH of:

$$\begin{aligned} \text{pH} &= -\log[\text{H}_3\text{O}^+] \\ &= -\log(1.0 \times 10^{-3}) \\ &= -(-3.00) \\ &= 3.00 \end{aligned}$$

Notice that we report the pH to two *decimal places* here. This is because only the numbers to the right of the decimal point are significant in a logarithm. Because our original value for the concentration had two significant figures, the log of that number has two decimal places:

2 significant digits 2 decimal places

$$-\log \underline{1.0} \times 10^{-3} = \underline{3.00}$$

If the original number had three significant digits, we would report the log to three decimal places:

3 significant digits 3 decimal places

$$-\log \underline{1.00} \times 10^{-3} = \underline{3.000}$$

A solution with $[\text{H}_3\text{O}^+] = 1.0 \times 10^{-7} \text{ M}$ (neutral) has a pH of:

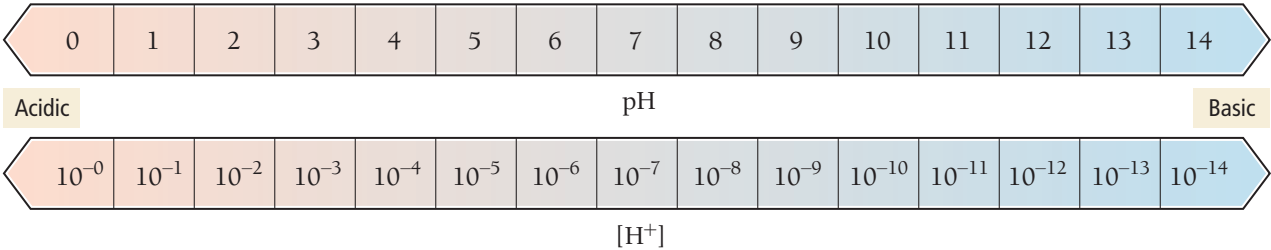
$$\begin{aligned} \text{pH} &= -\log[\text{H}_3\text{O}^+] \\ &= -\log(1.0 \times 10^{-7}) \\ &= -(-7.00) \\ &= 7.00 \end{aligned}$$

In general, at 25°C

- $\text{pH} < 7$ The solution is *acidic*.
- $\text{pH} > 7$ The solution is *basic*.
- $\text{pH} = 7$ The solution is *neutral*.

Table 16.6 lists the pH of some common substances. As we discussed in Section 16.2, many foods, especially fruits, are acidic and have low pH values. Relatively few foods are basic. The foods with the lowest pH values are limes and lemons, and they are among the sourest. Because the pH scale is a *logarithmic scale*, a change of 1 pH unit corresponds to a tenfold change in H_3O^+ concentration (**Figure 16.7** ▼). For example, a lime with a pH of 2.0 is 10 times more acidic than a plum with a pH of 3.0 and 100 times more acidic than a cherry with a pH of 4.0.

The pH Scale



► FIGURE 16.7 The pH Scale

An increase of 1 on the pH scale corresponds to a tenfold decrease in $[\text{H}^+]$.

EXAMPLE 16.3

Interactive
Worked Example
Video 16.3

PEARSON
eText
2.0

Calculating pH from [H₃O⁺] or [OH⁻]

Calculate the pH of each solution at 25°C and indicate whether the solution is acidic or basic.

(a) [H₃O⁺] = 1.8 × 10⁻⁴ M (b) [OH⁻] = 1.3 × 10⁻² M

SOLUTION

<p>(a) To calculate pH, substitute the given [H₃O⁺] into the pH equation.</p> <p>Since pH < 7, this solution is acidic.</p>	<p>pH = -log[H₃O⁺] = -log(1.8 × 10⁻⁴) = -(-3.74) = 3.74(acidic)</p>
<p>(b) First use K_w to find [H₃O⁺] from [OH⁻].</p> <p>Then substitute [H₃O⁺] into the pH expression to find pH.</p> <p>Since pH > 7, this solution is basic.</p>	<p>[H₃O⁺][OH⁻] = K_w = 1.0 × 10⁻¹⁴ [H₃O⁺](1.3 × 10⁻²) = 1.0 × 10⁻¹⁴ [H₃O⁺] = $\frac{1.0 \times 10^{-14}}{1.3 \times 10^{-2}}$ = 7.7 × 10⁻¹³ M pH = -log[H₃O⁺] = -log(7.7 × 10⁻¹³) = -(-12.11) = 12.11(basic)</p>

FOR PRACTICE 16.3

Calculate the pH of each solution and indicate whether the solution is acidic or basic.

(a) [H₃O⁺] = 9.5 × 10⁻⁹ M (b) [OH⁻] = 7.1 × 10⁻³ M

EXAMPLE 16.4

Calculating [H₃O⁺] from pH

Calculate [H₃O⁺] for a solution with a pH of 4.80.

SOLUTION

<p>To determine [H₃O⁺] from pH, start with the equation that defines pH. Substitute the given value of pH and then solve for [H₃O⁺]. Because the given pH value was reported to two decimal places, the [H₃O⁺] is written to two significant figures. (Remember that 10^{log x} = x; see Appendix I. Some calculators use an inv log key to represent this function.)</p>	<p>pH = -log[H₃O⁺] 4.80 = -log[H₃O⁺] -4.80 = log[H₃O⁺] 10^{-4.80} = 10^{log[H₃O⁺]} 10^{-4.80} = [H₃O⁺] [H₃O⁺] = 1.6 × 10⁻⁵ M</p>
---	---

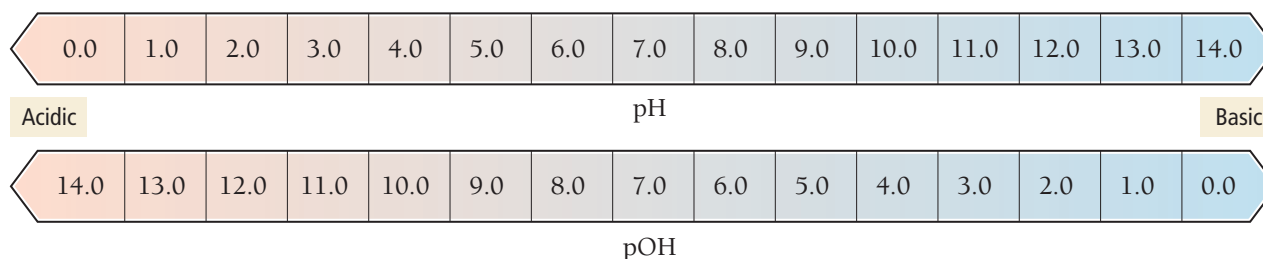
FOR PRACTICE 16.4

Calculate [H₃O⁺] for a solution with a pH of 8.37.

pOH and Other p Scales

The pOH scale is analogous to the pH scale, but we define pOH with respect to [OH⁻] instead of [H₃O⁺].

pOH = -log[OH⁻]

► **FIGURE 16.8** pH and pOH

A solution with an $[\text{OH}^-]$ of $1.0 \times 10^{-3} \text{ M}$ (basic) has a pOH of 3.00. On the pOH scale, a pOH less than 7 is basic and a pOH greater than 7 is acidic. A pOH of 7 is neutral (**Figure 16.8** ▲). We can derive a relationship between pH and pOH at 25°C from the expression for K_w :

$$[\text{H}_3\text{O}^+][\text{OH}^-] = 1.0 \times 10^{-14}$$

Taking the log of both sides, we get:

$$\begin{aligned}\log([\text{H}_3\text{O}^+][\text{OH}^-]) &= \log(1.0 \times 10^{-14}) \\ \log[\text{H}_3\text{O}^+] + \log[\text{OH}^-] &= -14.00 \\ -\log[\text{H}_3\text{O}^+] - \log[\text{OH}^-] &= 14.00 \\ \text{pH} + \text{pOH} &= 14.00\end{aligned}$$

The sum of pH and pOH is always equal to 14.00 at 25°C . Therefore, a solution with a pH of 3 has a pOH of 11.

Another common p scale is the $\text{p}K_a$ scale defined as:

$$\text{p}K_a = -\log K_a$$

The $\text{p}K_a$ of a weak acid is another way to quantify strength. The smaller the $\text{p}K_a$, the stronger the acid. For example, chlorous acid, with a K_a of 1.1×10^{-2} , has a $\text{p}K_a$ of 1.96 and formic acid, with a K_a of 1.8×10^{-4} , has a $\text{p}K_a$ of 3.74.

Notice that p is the mathematical operator $-\log$; thus, $\text{p}X = -\log X$.



16.5
Cc

Conceptual
Connection

pH and Acidity

As the pH of a solution increases (gets higher), what happens to the acidity of the solution?

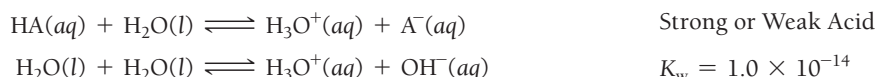
- (a) The acidity increases. (b) The acidity decreases. (c) The acidity remains constant.



KEY CONCEPT VIDEO
**Finding the $[\text{H}_3\text{O}^+]$ and pH
of Strong and Weak Acid
Solutions**

16.7 Finding the $[\text{H}_3\text{O}^+]$ and pH of Strong and Weak Acid Solutions

In a solution containing a strong or weak acid, there are two potential sources of H_3O^+ : the ionization of the acid itself and the autoionization of water. If we let HA be a strong or weak acid, the ionization reactions are:



Except in extremely dilute acid solutions, the autoionization of water contributes a negligibly small amount of H_3O^+ compared to the ionization of the strong or weak acid. Recall from Section 16.6 that autoionization in pure water produces an H_3O^+ concentration of $1.0 \times 10^{-7} \text{ M}$. In a strong or weak acid solution, the additional H_3O^+ from the acid causes the autoionization of water equilibrium to shift left (as described by Le Châtelier's principle). Consequently, in most strong or weak acid solutions, the autoionization of water produces even less H_3O^+ than in pure water and can be ignored. Therefore, we can focus exclusively on the amount of H_3O^+ produced by the acid.

Strong Acids

Because strong acids, by definition, completely ionize in solution, and because we can (in nearly all cases) ignore the contribution of the autoionization of water, *the concentration of H_3O^+ in a strong acid solution is equal to the concentration of the strong acid*. For example, a 0.10 M HCl solution has an H_3O^+ concentration of 0.10 M and a pH of 1.00:

$$0.10\text{ M HCl} \Rightarrow [H_3O^+] = 0.10\text{ M} \Rightarrow \text{pH} = -\log(0.10) = 1.00$$

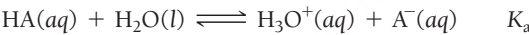
Weak Acids

Determining the pH of a weak acid solution is more complicated because the concentration of H_3O^+ is *not equal* to the concentration of the weak acid. For example, if we make solutions of 0.10 M HCl (a strong acid) and 0.10 M acetic acid (a weak acid) in the laboratory and measure the pH of each, we get the following results:

$$0.10\text{ M HCl} \qquad \text{pH} = 1.00$$

$$0.10\text{ M HC}_2\text{H}_3\text{O}_2 \qquad \text{pH} = 2.87$$

The pH of the acetic acid solution is higher (it is less acidic) because acetic acid only partially ionizes. Calculating the $[H_3O^+]$ formed by the ionization of a weak acid requires solving an equilibrium problem similar to those in Chapter 15. Consider, for example, a 0.10-M solution of the generic weak acid HA with an acid ionization constant K_a . Since we can ignore the contribution of the autoionization of water, we only have to determine the concentration of H_3O^+ formed by the following equilibrium:



We can summarize the initial conditions, the changes, and the equilibrium conditions in the following ICE table:

	[HA]	[H ₃ O ⁺]	[A [−]]
Initial	0.10	≈ 0.00	0.00
Change	−x	+x	+x
Equilibrium	0.10 − x	x	x

In the table, we list the initial H_3O^+ concentration as *approximately* zero because of the negligibly small contribution of H_3O^+ due to the autoionization of water (discussed previously). The variable x represents the amount of HA that ionizes.

As discussed in Chapter 15, each *equilibrium* concentration is the sum of the two entries above it in the ICE table. In order to find the equilibrium concentration of H_3O^+ , we must find the value of the variable x . We can use the equilibrium expression to set up an equation in which x is the only variable:

$$\begin{aligned} K_a &= \frac{[H_3O^+][A^-]}{[HA]} \\ &= \frac{x^2}{0.10 - x} \end{aligned}$$

As is often the case with equilibrium problems, we arrive at a quadratic equation in x , which we can solve using the quadratic formula. However, in many cases we can apply the *x is small* approximation (first discussed in Section 15.8).

In Examples 16.5 and 16.6, we examine the general procedure for solving weak acid equilibrium problems. In both of these examples, the *x is small* approximation works well. In Example 16.7, we solve a problem in which the *x is small* approximation does not work. In such cases, we can solve the quadratic equation explicitly, or we can apply the method of successive approximations (also discussed in Section 15.8). Finally, in Example 16.8, we work a problem in which we find the equilibrium constant of a weak acid from its pH.

The only exceptions are extremely dilute ($<10^{-5}$ M) strong acid solutions.

ICE tables were first introduced in Section 15.6. The reactant $H_2O(l)$ is a pure liquid and is therefore not included in either the equilibrium constant expression or the ICE table (see Section 15.5).

PROCEDURE FOR

Finding the pH
(or $[\text{H}_3\text{O}^+]$) of a
Weak Acid Solution

To solve these types of problems, follow the procedure outlined below.

1. Write the balanced equation for the ionization of the acid and use it as a guide to prepare an ICE table showing the given concentration of the weak acid as its initial concentration. Leave room in the table for the changes in concentrations and for the equilibrium concentrations. (Note that the $[\text{H}_3\text{O}^+]$ is listed as approximately zero because the autoionization of water produces a negligibly small amount of H_3O^+ .)

2. Represent the change in the concentration of H_3O^+ with the variable x . Define the changes in the concentrations of the other reactants and products in terms of x . Always keep in mind the stoichiometry of the reaction.

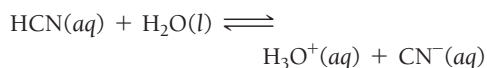
3. Sum each column to determine the equilibrium concentrations in terms of the initial concentrations and the variable x .

4. Substitute the expressions for the equilibrium concentrations (from Step 3) into the expression for the acid ionization constant (K_a). In many cases, you can make the approximation that x is *small* (as discussed in Section 15.8). Substitute the value of the acid ionization constant (from Table 16.5) into the K_a expression and solve for x .

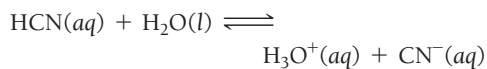
EXAMPLE 16.5

Finding the $[\text{H}_3\text{O}^+]$ of a Weak Acid Solution

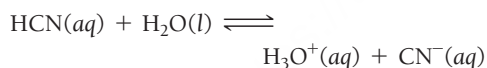
Find the $[\text{H}_3\text{O}^+]$ of a 0.100 M HCN solution.



	[HCN]	$[\text{H}_3\text{O}^+]$	$[\text{CN}^-]$
Initial	0.100	≈ 0.00	0.00
Change			
Equil			



	[HCN]	$[\text{H}_3\text{O}^+]$	$[\text{CN}^-]$
Initial	0.100	≈ 0.00	0.00
Change	$-x$	$+x$	$+x$
Equil			



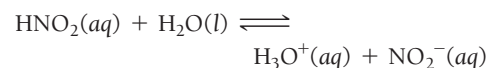
	[HCN]	$[\text{H}_3\text{O}^+]$	$[\text{CN}^-]$
Initial	0.100	≈ 0.00	0.00
Change	$-x$	$+x$	$+x$
Equil	$0.100 - x$	x	x

$$\begin{aligned}
 K_a &= \frac{[\text{H}_3\text{O}^+][\text{CN}^-]}{[\text{HCN}]} \\
 &= \frac{x^2}{0.100 - x} \quad (x \text{ is small}) \\
 4.9 \times 10^{-10} &= \frac{x^2}{0.100} \\
 \sqrt{4.9 \times 10^{-10}} &= \sqrt{\frac{x^2}{0.100}} \\
 x &= \sqrt{(0.100)(4.9 \times 10^{-10})} \\
 &= 7.0 \times 10^{-6}
 \end{aligned}$$

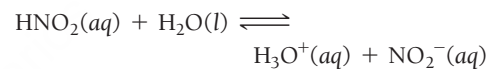
EXAMPLE 16.6

Finding the pH of a Weak Acid Solution

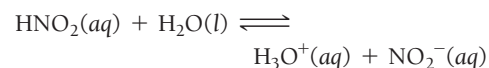
Find the pH of a 0.200 M HNO_2 solution.



	$[\text{HNO}_2]$	$[\text{H}_3\text{O}^+]$	$[\text{NO}_2^-]$
Initial	0.200	≈ 0.00	0.00
Change			
Equil			



	$[\text{HNO}_2]$	$[\text{H}_3\text{O}^+]$	$[\text{NO}_2^-]$
Initial	0.200	≈ 0.00	0.00
Change	$-x$	$+x$	$+x$
Equil			



	$[\text{HNO}_2]$	$[\text{H}_3\text{O}^+]$	$[\text{NO}_2^-]$
Initial	0.200	≈ 0.00	0.00
Change	$-x$	$+x$	$+x$
Equil	$0.200 - x$	x	x

$$\begin{aligned}
 K_a &= \frac{[\text{H}_3\text{O}^+][\text{NO}_2^-]}{[\text{HNO}_2]} \\
 &= \frac{x^2}{0.200 - x} \quad (x \text{ is small}) \\
 4.6 \times 10^{-4} &= \frac{x^2}{0.200} \\
 \sqrt{4.6 \times 10^{-4}} &= \sqrt{\frac{x^2}{0.200}} \\
 x &= \sqrt{(0.200)(4.6 \times 10^{-4})} \\
 &= 9.6 \times 10^{-3}
 \end{aligned}$$

Confirm that the x is <i>small</i> approximation is valid by calculating the ratio of x to the number it was subtracted from in the approximation. The ratio should be less than 0.05 (or 5%).	$\frac{7.0 \times 10^{-6}}{0.100} \times 100\% = 7.0 \times 10^{-3}\%$ <p>Therefore, the approximation is valid.</p>	$\frac{9.6 \times 10^{-3}}{0.200} \times 100\% = 4.8\%$ <p>Therefore, the approximation is valid (but barely so).</p>
5. Determine the $[\text{H}_3\text{O}^+]$ from the calculated value of x and calculate the pH if necessary.	$[\text{H}_3\text{O}^+] = 7.0 \times 10^{-6} \text{ M}$ <p>(pH was not asked for in this problem.)</p>	$[\text{H}_3\text{O}^+] = 9.6 \times 10^{-3} \text{ M}$ $\text{pH} = -\log[\text{H}_3\text{O}^+]$ $= -\log(9.6 \times 10^{-3})$ $= 2.02$
6. Check your answer by substituting the calculated equilibrium values into the acid ionization expression. The calculated value of K_a should match the given value of K_a . Note that rounding errors and the x is <i>small</i> approximation could result in a difference in the least significant digit when comparing values of K_a .	$K_a = \frac{[\text{H}_3\text{O}^+][\text{CN}^-]}{[\text{HCN}]} = \frac{(7.0 \times 10^{-6})^2}{0.100}$ $= 4.9 \times 10^{-10}$ <p>Since the calculated value of K_a matches the given value, the answer is valid.</p>	$K_a = \frac{[\text{H}_3\text{O}^+][\text{NO}_2^-]}{[\text{HNO}_2]} = \frac{(9.6 \times 10^{-3})^2}{0.200}$ $= 4.6 \times 10^{-4}$ <p>Since the calculated value of K_a matches the given value, the answer is valid.</p>
	FOR PRACTICE 16.5 Find the H_3O^+ concentration of a 0.250 M hydrofluoric acid solution.	FOR PRACTICE 16.6 Find the pH of a 0.0150 M acetic acid solution.

EXAMPLE 16.7

Finding the pH of a Weak Acid Solution in Cases Where the x is *small* Approximation Does Not Work

Interactive
Worked Example
Video 16.7

PEARSON
eText
2.0

Find the pH of a 0.100 M HClO_2 solution.																	
SOLUTION																	
<p>1. Write the balanced equation for the ionization of the acid and use it as a guide to prepare an ICE table showing the given concentration of the weak acid as its initial concentration.</p> <p>(Note that the H_3O^+ concentration is listed as approximately zero. Although a little H_3O^+ is present from the autoionization of water, this amount is negligibly small compared to the amount of H_3O^+ produced by the acid.)</p>	<div>$\text{HClO}_2(aq) + \text{H}_2\text{O}(l) \rightleftharpoons \text{H}_3\text{O}^+(aq) + \text{ClO}_2^-(aq)$<table><tr><th></th><th>$[\text{HClO}_2]$</th><th>$[\text{H}_3\text{O}^+]$</th><th>$[\text{ClO}_2^-]$</th></tr><tr><td>Initial</td><td>0.100</td><td>≈ 0.00</td><td>0.00</td></tr><tr><td>Change</td><td></td><td></td><td></td></tr><tr><td>Equil</td><td></td><td></td><td></td></tr></table></div>		$[\text{HClO}_2]$	$[\text{H}_3\text{O}^+]$	$[\text{ClO}_2^-]$	Initial	0.100	≈ 0.00	0.00	Change				Equil			
	$[\text{HClO}_2]$	$[\text{H}_3\text{O}^+]$	$[\text{ClO}_2^-]$														
Initial	0.100	≈ 0.00	0.00														
Change																	
Equil																	
<p>2. Represent the change in $[\text{H}_3\text{O}^+]$ with the variable x. Define the changes in the concentrations of the other reactants and products in terms of x.</p>	<div>$\text{HClO}_2(aq) + \text{H}_2\text{O}(l) \rightleftharpoons \text{H}_3\text{O}^+(aq) + \text{ClO}_2^-(aq)$<table><tr><th></th><th>$[\text{HClO}_2]$</th><th>$[\text{H}_3\text{O}^+]$</th><th>$[\text{ClO}_2^-]$</th></tr><tr><td>Initial</td><td>0.100</td><td>≈ 0.00</td><td>0.00</td></tr><tr><td>Change</td><td>$-x$</td><td>$+x$</td><td>$+x$</td></tr><tr><td>Equil</td><td></td><td></td><td></td></tr></table></div>		$[\text{HClO}_2]$	$[\text{H}_3\text{O}^+]$	$[\text{ClO}_2^-]$	Initial	0.100	≈ 0.00	0.00	Change	$-x$	$+x$	$+x$	Equil			
	$[\text{HClO}_2]$	$[\text{H}_3\text{O}^+]$	$[\text{ClO}_2^-]$														
Initial	0.100	≈ 0.00	0.00														
Change	$-x$	$+x$	$+x$														
Equil																	

—Continued on the next page

Continued from the previous page—

3. Sum each column to determine the equilibrium concentrations in terms of the initial concentrations and the variable x .	$\text{HClO}_2(aq) + \text{H}_2\text{O}(l) \rightleftharpoons \text{H}_3\text{O}^+(aq) + \text{ClO}_2^-(aq)$ <table><tr><th></th><th>$[\text{HClO}_2]$</th><th>$[\text{H}_3\text{O}^+]$</th><th>$[\text{ClO}_2^-]$</th></tr><tr><td>Initial</td><td>0.100</td><td>≈ 0.00</td><td>0.00</td></tr><tr><td>Change</td><td>$-x$</td><td>$+x$</td><td>$+x$</td></tr><tr><td>Equil</td><td>$0.100 - x$</td><td>x</td><td>x</td></tr></table>		$[\text{HClO}_2]$	$[\text{H}_3\text{O}^+]$	$[\text{ClO}_2^-]$	Initial	0.100	≈ 0.00	0.00	Change	$-x$	$+x$	$+x$	Equil	$0.100 - x$	x	x
	$[\text{HClO}_2]$	$[\text{H}_3\text{O}^+]$	$[\text{ClO}_2^-]$														
Initial	0.100	≈ 0.00	0.00														
Change	$-x$	$+x$	$+x$														
Equil	$0.100 - x$	x	x														
4. Substitute the expressions for the equilibrium concentrations (from Step 3) into the expression for the acid ionization constant (K_a). Make the x is <i>small</i> approximation and substitute the value of the acid ionization constant (from Table 16.5) into the K_a expression. Solve for x . Check to see if the x is <i>small</i> approximation is valid by calculating the ratio of x to the number it was subtracted from in the approximation. The ratio should be less than 0.05 (or 5%).	$K_a = \frac{[\text{H}_3\text{O}^+][\text{ClO}_2^-]}{[\text{HClO}_2]}$ $= \frac{x^2}{0.100 - x} \quad (x \text{ is small})$ $0.011 = \frac{x^2}{0.100}$ $\sqrt{0.011} = \sqrt{\frac{x^2}{0.100}}$ $x = \sqrt{(0.100)(0.011)} = 0.033$ $\frac{0.033}{0.100} \times 100\% = 33\%$ Therefore, the x is <i>small</i> approximation is <i>not valid</i> .																
4a. If the x is <i>small</i> approximation is not valid, solve the quadratic equation explicitly or use the method of successive approximations to find x . In this case, we solve the quadratic equation.	$0.011 = \frac{x^2}{0.100 - x}$ $0.011(0.100 - x) = x^2$ $0.0011 - 0.011x = x^2$ $x^2 + 0.011x - 0.0011 = 0$ $x = \frac{-b \pm \sqrt{b^2 - 4ac}}{2a}$ $= \frac{-(0.011) \pm \sqrt{(0.011)^2 - 4(1)(-0.0011)}}{2(1)}$ $= \frac{-0.011 \pm 0.0672}{2}$ $x = -0.039 \text{ or } x = 0.028$ <p>Since x represents the concentration of H_3O^+ and since concentrations cannot be negative, we reject the negative root.</p> $x = 0.028$																
5. Determine the H_3O^+ concentration from the calculated value of x and calculate the pH.	$[\text{H}_3\text{O}^+] = 0.028 \text{ M}$ $\text{pH} = -\log[\text{H}_3\text{O}^+]$ $= -\log 0.028$ $= 1.55$																
6. Check your answer by substituting the calculated equilibrium values into the acid ionization expression. The calculated value of K_a should match the given value of K_a . Note that rounding errors could result in a difference in the least significant digit when comparing values of K_a .	$K_a = \frac{[\text{H}_3\text{O}^+][\text{ClO}_2^-]}{[\text{HClO}_2]} = \frac{0.028^2}{0.100 - 0.028} = 0.011$ <p>Since the calculated value of K_a matches the given value, the answer is valid.</p>																
FOR PRACTICE 16.7 Find the pH of a 0.010 M HNO_2 solution.																	

EXAMPLE 16.8

Interactive
Worked Example
Video 16.8



Finding the Equilibrium Constant from pH

A 0.100 M weak acid (HA) solution has a pH of 4.25. Find K_a for the acid.

SOLUTION

Use the given pH to find the equilibrium concentration of H_3O^+ . Then write the balanced equation for the ionization of the acid and use it as a guide to prepare an ICE table showing all known concentrations.

$pH = -\log[H_3O^+]$
 $4.25 = -\log[H_3O^+]$
 $[H_3O^+] = 5.6 \times 10^{-5} M$
 $HA(aq) + H_2O(l) \rightleftharpoons H_3O^+(aq) + A^-(aq)$

	[HA]	[H ₃ O ⁺]	[A ⁻]
Initial	0.100	≈ 0.00	0.00
Change			
Equil		5.6×10^{-5}	

Use the equilibrium concentration of H_3O^+ and the stoichiometry of the reaction to predict the changes and equilibrium concentration for all species. For most weak acids, the initial and equilibrium concentrations of the weak acid (HA) are equal because the amount that ionizes is usually very small compared to the initial concentration.

$HA(aq) + H_2O(l) \rightleftharpoons H_3O^+(aq) + A^-(aq)$

	[HA]	[H ₃ O ⁺]	[A ⁻]
Initial	0.100	≈ 0.00	0.00
Change	-5.6×10^{-5}	$+5.6 \times 10^{-5}$	$+5.6 \times 10^{-5}$
Equil	$(0.100 - 5.6 \times 10^{-5}) \approx 0.100$	5.6×10^{-5}	5.6×10^{-5}

Substitute the equilibrium concentrations into the expression for K_a and calculate its value.

$$K_a = \frac{[H_3O^+][A^-]}{[HA]}$$
$$= \frac{(5.6 \times 10^{-5})(5.6 \times 10^{-5})}{0.100}$$
$$= 3.1 \times 10^{-8}$$

FOR PRACTICE 16.8

A 0.175 M weak acid solution has a pH of 3.25. Find K_a for the acid.

The *x is small* Approximation

The initial concentration and the K_a values of several weak acid (HA) solutions are listed here. For which of these is the *x is small* approximation *least* likely to work in finding the pH of the solution?

- (a) initial [HA] = 0.100 M; $K_a = 1.0 \times 10^{-5}$
- (b) initial [HA] = 1.00 M; $K_a = 1.0 \times 10^{-6}$
- (c) initial [HA] = 0.0100 M; $K_a = 1.0 \times 10^{-3}$
- (d) initial [HA] = 1.0 M; $K_a = 1.5 \times 10^{-3}$

16.6



Conceptual
Connection



Strong and Weak Acids

Which solution is most acidic (that is, which one has the lowest pH)?

- (a) 0.10 M HCl
- (b) 0.10 M HF
- (c) 0.20 M HF

16.7



Conceptual
Connection



Percent Ionization of a Weak Acid

We can quantify the ionization of a weak acid according to the percentage of acid molecules that actually ionize. We define the **percent ionization** of a weak acid as the ratio of the ionized acid concentration to the initial acid concentration, multiplied by 100%:

$$\text{percent ionization} = \frac{\text{concentration of ionized acid}}{\text{initial concentration of acid}} \times 100\% = \frac{[\text{H}_3\text{O}^+]_{\text{equil}}}{[\text{HA}]_{\text{init}}} \times 100\%$$

Because the concentration of ionized acid is equal to the H_3O^+ concentration at equilibrium (for a monoprotic acid), we can use $[\text{H}_3\text{O}^+]_{\text{equil}}$ and $[\text{HA}]_{\text{init}}$ in the formula to calculate the percent ionization. For instance, in Example 16.6, we found that a 0.200 M HNO_2 solution contains 9.6×10^{-3} M H_3O^+ . The 0.200 M HNO_2 solution therefore has the following percent ionization:

$$\% \text{ ionization} = \frac{[\text{H}_3\text{O}^+]_{\text{equil}}}{[\text{HA}]_{\text{init}}} \times 100\% = \frac{9.6 \times 10^{-3} \text{ M}}{0.200 \text{ M}} \times 100\% = 4.8\%$$

As we can see, the percent ionization is relatively small. In this case, even though HNO_2 has the second largest K_a in Table 16.5, less than five molecules out of one hundred ionize. For most other weak acids (with smaller K_a values) the percent ionization is even less.

In Example 16.9, we calculate the percent ionization of a more concentrated HNO_2 solution. In the example, notice that the calculated H_3O^+ concentration is much greater (as we would expect for a more concentrated solution), but the *percent ionization* is actually smaller.

EXAMPLE 16.9

Finding the Percent Ionization of a Weak Acid


Interactive
Worked Example
Video 16.9

PEARSON
eText
2.0

Find the percent ionization of a 2.5 M HNO_2 solution.

SOLUTION

To find the percent ionization, you must find the equilibrium concentration of H_3O^+ . Follow the procedure in Example 16.5, shown in condensed form here.



	$[\text{HNO}_2]$	$[\text{H}_3\text{O}^+]$	$[\text{NO}_2^-]$
Initial	2.5	≈ 0.00	0.00
Change	$-x$	$+x$	$+x$
Equil	$2.5 - x$	x	x

$$K_a = \frac{[\text{H}_3\text{O}^+][\text{NO}_2^-]}{[\text{HNO}_2]} = \frac{x^2}{2.5 - x} \quad (x \text{ is small})$$

$$4.6 \times 10^{-4} = \frac{x^2}{2.5}$$

$$x = 0.034$$

$$\text{Therefore, } [\text{H}_3\text{O}^+] = 0.034 \text{ M.}$$

Use the definition of percent ionization to calculate it. (Since the percent ionization is less than 5%, the x is *small* approximation is valid.)

$$\begin{aligned} \% \text{ ionization} &= \frac{[\text{H}_3\text{O}^+]_{\text{equil}}}{[\text{HA}]_{\text{init}}} \times 100\% \\ &= \frac{0.034 \text{ M}}{2.5 \text{ M}} \times 100\% = 1.4\% \end{aligned}$$

FOR PRACTICE 16.9

Find the percent ionization of a 0.250 M $\text{HC}_2\text{H}_3\text{O}_2$ solution.

We can summarize the results of Examples 16.6 and 16.9:

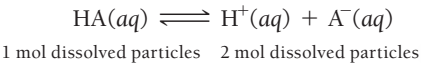
[HNO ₂]	[H ₃ O ⁺]	Percent Ionization
0.200	0.0096	4.8%
2.5	0.034	1.4%

The trend you can see in the above table applies to all weak acids.

- The *equilibrium H₃O⁺ concentration* of a weak acid *increases* with increasing initial concentration of the acid.
- The *percent ionization* of a weak acid *decreases* with increasing concentration of the acid.

In other words, as the concentration of a weak acid solution increases, the concentration of the hydronium ion also increases, but the increase is not linear. The H₃O⁺ concentration increases more slowly than the concentration of the acid because as the acid concentration increases, a smaller fraction of weak acid molecules ionizes.

We can understand this behavior by analogy with Le Châtelier’s principle. Consider the following weak acid ionization equilibrium:



If we dilute a weak acid solution initially at equilibrium, the system (according to Le Châtelier’s principle) responds to minimize the disturbance. The equilibrium shifts to the right because the right side of the equation contains more particles in solution (2 mol versus 1 mol) than the left side. If the system shifts to the right, the percent ionization is greater in the more dilute solution, which is what we observe.

Percent Ionization

Which of these weak acid solutions has the greatest percent ionization? Which solution has the lowest (most acidic) pH?

- (a) 0.100 M HC₂H₃O₂ (b) 0.500 M HC₂H₃O₂ (c) 0.0100 M HC₂H₃O₂

16.8



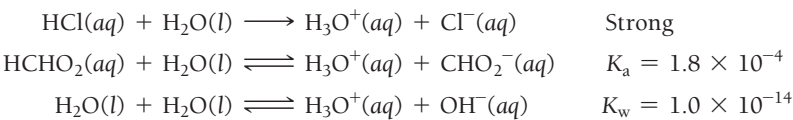
Conceptual Connection



Mixtures of Acids

Determining the pH of a mixture of acids may seem difficult at first. However, in many cases, the relative strengths of the acids in the mixture allow us to neglect the weaker acid and focus only on the stronger one. Here, we consider two possible acid mixtures: a strong acid with a weak acid and a weak acid with another weak acid.

A Strong Acid and a Weak Acid Consider a mixture that is 0.10 M in HCl and 0.10 M in HCHO₂. There are three sources of H₃O⁺ ions: the strong acid (HCl), the weak acid (HCHO₂), and the autoionization of water.

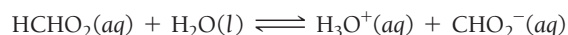


Since HCl is strong, we know that it completely ionizes to produce a significant concentration of H₃O⁺ (0.10 M). The H₃O⁺ formed by HCl then *suppresses* the formation of additional H₃O⁺ formed by the ionization of HCHO₂ or the autoionization of water. In other words, according to Le Châtelier’s principle, the formation of H₃O⁺ by the strong acid causes the weak acid to ionize even less than it would in the absence of the strong acid. To see this clearly, we can calculate [H₃O⁺] and [CHO₂[−]] in this solution.

In an initial estimate of [H₃O⁺], we can neglect the contribution of HCHO₂ and H₂O. The concentration of H₃O⁺ is then equal to the initial concentration of HCl:

$$[\text{H}_3\text{O}^+] = [\text{HCl}] = 0.10 \text{ M}$$

To find $[\text{CHO}_2^-]$, we must solve an equilibrium problem. However, the initial concentration of H_3O^+ in this case is not negligible (as it has been in all the other weak acid equilibrium problems that we have worked so far) because HCl has formed a significant amount of H_3O^+ . The concentration of H_3O^+ formed by HCl becomes the *initial* concentration of H_3O^+ in the ICE table for HCHO_2 , as shown here:



	$[\text{HCHO}_2]$	$[\text{H}_3\text{O}^+]$	$[\text{CHO}_2^-]$
Initial	0.10	0.10	0.00
Change	$-x$	$+x$	$+x$
Equil	$0.10 - x$	$0.10 + x$	x

We then use the equilibrium expression to set up an equation in which x is the only variable:

$$\begin{aligned} K_a &= \frac{[\text{H}_3\text{O}^+][\text{CHO}_2^-]}{[\text{HCHO}_2]} \\ &= \frac{(0.10 + x)x}{0.10 - x} \end{aligned}$$

Since the equilibrium constant is small relative to the initial concentration of the acid, we can make the x is *small* approximation:

$$\begin{aligned} K_a &= \frac{(0.10 + x)x}{0.10 - x} \\ 1.8 \times 10^{-4} &= \frac{(0.10)x}{0.10} \\ x &= 1.8 \times 10^{-4} \end{aligned}$$

We check the x is *small* approximation and find it is valid:

$$\frac{1.8 \times 10^{-4}}{0.10} \times 100\% = 0.18\%$$

Therefore, $[\text{CHO}_2^-] = 1.8 \times 10^{-4} \text{ M}$. We can now see that we can completely ignore the ionization of the weak acid (HCHO_2) in calculating $[\text{H}_3\text{O}^+]$ for the mixture. The contribution to the concentration of H_3O^+ by the weak acid must necessarily be equal to the concentration of CHO_2^- that we just calculated (because of the stoichiometry of the ionization reaction). Therefore, we have the following contributions to $[\text{H}_3\text{O}^+]$:

HCl contributes 0.10 M.

HCHO_2 contributes $1.8 \times 10^{-4} \text{ M}$ or 0.00018 M.

Total $[\text{H}_3\text{O}^+] = 0.10 \text{ M} + 0.00018 \text{ M} = 0.10 \text{ M}$.

As we can see, because the significant figure rules for addition limit the answer to two decimal places, the amount of H_3O^+ contributed by HCHO_2 is completely negligible. The amount of H_3O^+ contributed by the autoionization of water is even smaller and therefore similarly negligible.

A Mixture of Two Weak Acids When we mix two weak acids, we again have three potential sources of H_3O^+ to consider: each of the two weak acids and the autoionization of water. However, if the K_a values of the two weak acids are sufficiently different in magnitude (if they differ by more than a factor of several hundred), then as long as the concentrations of the two acids are similar in magnitude (or the concentration of the stronger one is greater than that of the weaker), we can assume that the weaker acid will not make a significant contribution to the concentration of H_3O^+ . We make this assumption for the same reason that we made a similar assumption for a mixture of a strong acid and a weak one: The stronger acid suppresses the ionization of the weaker one, in accordance with Le Châtelier's principle. Example 16.10 shows how to calculate the concentration of H_3O^+ in a mixture of two weak acids.

EXAMPLE 16.10

Mixtures of Weak Acids

Find the pH of a mixture that is 0.300 M in HF and 0.100 M in HClO.

SOLUTION

<p>The three possible sources of H_3O^+ ions are HF, HClO, and H_2O. Write the ionization equations for the three sources and their corresponding equilibrium constants. Because the equilibrium constant for the ionization of HF is about 24,000 times larger than that for the ionization of HClO, the contribution of HF to $[\text{H}_3\text{O}^+]$ is by far the greatest. You can therefore calculate the $[\text{H}_3\text{O}^+]$ formed by HF only and neglect the other two potential sources of H_3O^+.</p>	$\text{HF}(aq) + \text{H}_2\text{O}(l) \rightleftharpoons \text{H}_3\text{O}^+(aq) + \text{F}^-(aq) \quad K_a = 6.8 \times 10^{-4}$ $\text{HClO}(aq) + \text{H}_2\text{O}(l) \rightleftharpoons \text{H}_3\text{O}^+(aq) + \text{ClO}^-(aq) \quad K_a = 2.9 \times 10^{-8}$ $\text{H}_2\text{O}(l) + \text{H}_2\text{O}(l) \rightleftharpoons \text{H}_3\text{O}^+(aq) + \text{OH}^-(aq) \quad K_w = 1.0 \times 10^{-14}$																
<p>Write the balanced equation for the ionization of HF and use it as a guide to prepare an ICE table.</p>	$\text{HF}(aq) + \text{H}_2\text{O}(l) \rightleftharpoons \text{H}_3\text{O}^+(aq) + \text{F}^-(aq)$ <table><tr><th></th><th>[HF]</th><th>[H₃O⁺]</th><th>[F⁻]</th></tr><tr><td>Initial</td><td>0.300</td><td>≈ 0.00</td><td>0.00</td></tr><tr><td>Change</td><td>-x</td><td>+x</td><td>+x</td></tr><tr><td>Equil</td><td>0.300 - x</td><td>x</td><td>x</td></tr></table>		[HF]	[H ₃ O ⁺]	[F ⁻]	Initial	0.300	≈ 0.00	0.00	Change	-x	+x	+x	Equil	0.300 - x	x	x
	[HF]	[H ₃ O ⁺]	[F ⁻]														
Initial	0.300	≈ 0.00	0.00														
Change	-x	+x	+x														
Equil	0.300 - x	x	x														
<p>Substitute the expressions for the equilibrium concentrations into the expression for the acid ionization constant (K_a). Because the equilibrium constant is small relative to the initial concentration of HF, you can make the x is <i>small</i> approximation. Substitute the value of the acid ionization constant (from Table 16.5) into the K_a expression and solve for x.</p> <p>Confirm that the x is <i>small</i> approximation is valid by calculating the ratio of x to the number it was subtracted from in the approximation. The ratio must be less than 0.05 (or 5%).</p>	$K_a = \frac{[\text{H}_3\text{O}^+][\text{F}^-]}{[\text{HF}]} = \frac{x^2}{0.300 - x} \quad (x \text{ is small})$ $6.8 \times 10^{-4} = \frac{x^2}{0.300}$ $\sqrt{(0.300)(6.8 \times 10^{-4})} = \sqrt{x^2}$ $x = 1.4 \times 10^{-3}$ $\frac{1.4 \times 10^{-3}}{0.300} \times 100\% = 4.7\%$ <p>Therefore, the approximation is valid (though barely so).</p>																
<p>Determine the H_3O^+ concentration from the calculated value of x and find the pH.</p>	$[\text{H}_3\text{O}^+] = 1.4 \times 10^{-3} \text{ M}$ $\text{pH} = -\log(1.4 \times 10^{-3}) = 1.85$																

FOR PRACTICE 16.10

Find the ClO⁻ concentration of the above mixture of HF and HClO.

Judging Relative pH

Which solution is most acidic (that is, has the lowest pH)?

- (a) 1.0 M HCl
- (b) 2.0 M HF
- (c) a solution that is 1.0 M in HF and 1.0 M in HClO

16.9



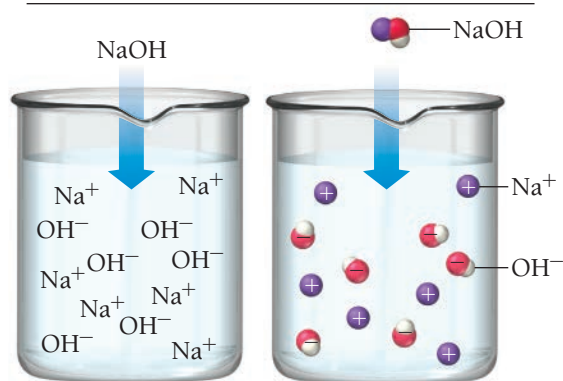
Conceptual Connection



16.8 Finding the $[\text{OH}^-]$ and pH of Strong and Weak Base Solutions

Like acids, bases can be strong or weak. Most strong bases are ionic compounds containing the OH^- ion. Most weak bases act as a base by accepting a proton from water. We examine each separately.

A Strong Base



▲ **FIGURE 16.9** Ionization of a Strong Base

Strong Bases

Just as we define a strong acid as one that completely ionizes in solution, analogously we define a *strong base* as one that completely dissociates in solution. NaOH, for example, is a strong base:



An NaOH solution contains no intact NaOH—it has all dissociated to form $\text{Na}^+(aq)$ and $\text{OH}^-(aq)$ (**Figure 16.9** ◀). In other words, a 1.0 M NaOH solution has $[\text{OH}^-] = 1.0 \text{ M}$ and $[\text{Na}^+] = 1.0 \text{ M}$. Table 16.7 lists the common strong bases.

As Table 16.7 illustrates, most strong bases are group 1A or group 2A metal hydroxides. The group 1A metal hydroxides are highly soluble in water and can form concentrated base solutions. The group 2A metal hydroxides, however, are only slightly soluble, a useful property for some applications. Notice that the general formula for the group 2A metal hydroxides is $\text{M}(\text{OH})_2$. When they dissolve in water, they produce 2 mol of OH^- per mole of the base. For example, $\text{Sr}(\text{OH})_2$ dissociates as follows:

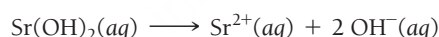
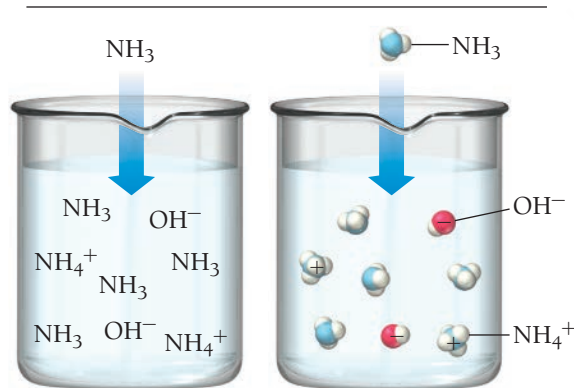


TABLE 16.7 Common Strong Bases

Lithium hydroxide (LiOH)	Strontium hydroxide $[\text{Sr}(\text{OH})_2]$
Sodium hydroxide (NaOH)	Calcium hydroxide $[\text{Ca}(\text{OH})_2]$
Potassium hydroxide (KOH)	Barium hydroxide $[\text{Ba}(\text{OH})_2]$

Unlike diprotic acids, which ionize in two steps, bases containing two OH^- ions dissociate in a single step.

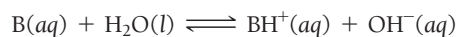
A Weak Base




▲ **FIGURE 16.10** Ionization of a Weak Base

Weak Bases

Recall that a *weak base* is analogous to a weak acid. Unlike strong bases that contain OH^- and *dissociate* in water, the most common weak bases produce OH^- by accepting a proton from water, ionizing water to form OH^- according to the general equation:



In this equation, B is a generic symbol for a weak base. Ammonia, for example, ionizes water as follows:

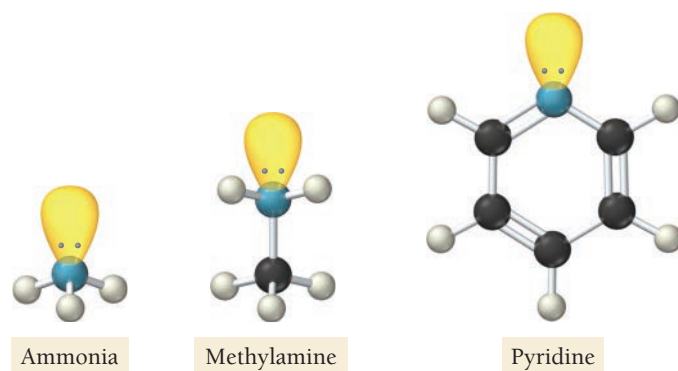


The double arrow indicates that the ionization is not complete. An NH_3 solution contains mostly NH_3 with only some NH_4^+ and OH^- (**Figure 16.10** ◀). A 1.0 M NH_3 solution has $[\text{OH}^-] < 1.0 \text{ M}$.

We quantify the extent of ionization of a weak base with the **base ionization constant**, K_b . For the general reaction in which a weak base ionizes water, we define K_b as follows:

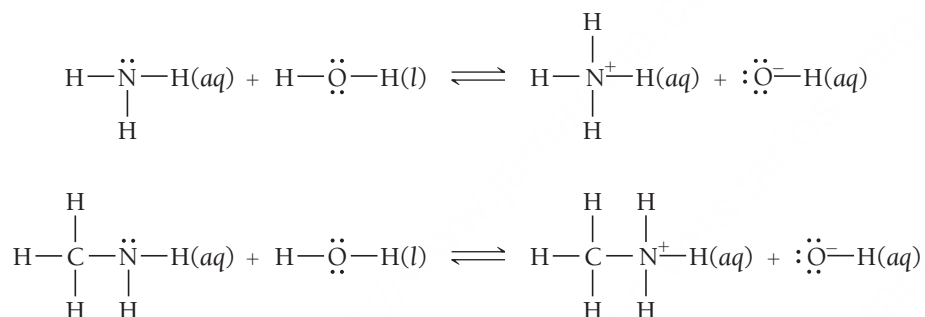
$$\text{B}(aq) + \text{H}_2\text{O}(l) \rightleftharpoons \text{BH}^+(aq) + \text{OH}^-(aq) \quad K_b = \frac{[\text{BH}^+][\text{OH}^-]}{[\text{B}]}$$

By analogy with K_a , the smaller the value of K_b , the weaker the base. Table 16.8 lists some common weak bases, their ionization reactions, and values for K_b . The “p” scale can also be applied to K_b , so that $\text{p}K_b = -\log K_b$.

◀ **FIGURE 16.11 Lone Pairs in Weak Bases**

Many weak bases have a nitrogen atom with a lone pair that acts as the proton acceptor.

All but two of the weak bases listed in Table 16.8 are either ammonia or *amines*, which we can think of as ammonia with one or more hydrocarbon groups substituted for one or more hydrogen atoms. All of these bases have a nitrogen atom with a lone pair (**Figure 16.11** ▲). This lone pair acts as the proton acceptor that makes the substance a base, as shown in the reactions for ammonia and methylamine:

**TABLE 16.8 Some Common Weak Bases**

Weak Base	Ionization Reaction	K_b
Carbonate ion (CO_3^{2-})*	$\text{CO}_3^{2-}(\text{aq}) + \text{H}_2\text{O}(\text{l}) \rightleftharpoons \text{HCO}_3^-(\text{aq}) + \text{OH}^-(\text{aq})$	1.8×10^{-4}
Methylamine (CH_3NH_2)	$\text{CH}_3\text{NH}_2(\text{aq}) + \text{H}_2\text{O}(\text{l}) \rightleftharpoons \text{CH}_3\text{NH}_3^+(\text{aq}) + \text{OH}^-(\text{aq})$	4.4×10^{-4}
Ethylamine ($\text{C}_2\text{H}_5\text{NH}_2$)	$\text{C}_2\text{H}_5\text{NH}_2(\text{aq}) + \text{H}_2\text{O}(\text{l}) \rightleftharpoons \text{C}_2\text{H}_5\text{NH}_3^+(\text{aq}) + \text{OH}^-(\text{aq})$	5.6×10^{-4}
Ammonia (NH_3)	$\text{NH}_3(\text{aq}) + \text{H}_2\text{O}(\text{l}) \rightleftharpoons \text{NH}_4^+(\text{aq}) + \text{OH}^-(\text{aq})$	1.76×10^{-5}
Bicarbonate ion (HCO_3^-)* (or hydrogen carbonate)	$\text{HCO}_3^-(\text{aq}) + \text{H}_2\text{O}(\text{l}) \rightleftharpoons \text{H}_2\text{CO}_3(\text{aq}) + \text{OH}^-(\text{aq})$	2.3×10^{-8}
Pyridine ($\text{C}_5\text{H}_5\text{N}$)	$\text{C}_5\text{H}_5\text{N}(\text{aq}) + \text{H}_2\text{O}(\text{l}) \rightleftharpoons \text{C}_5\text{H}_5\text{NH}^+(\text{aq}) + \text{OH}^-(\text{aq})$	1.7×10^{-9}
Aniline ($\text{C}_6\text{H}_5\text{NH}_2$)	$\text{C}_6\text{H}_5\text{NH}_2(\text{aq}) + \text{H}_2\text{O}(\text{l}) \rightleftharpoons \text{C}_6\text{H}_5\text{NH}_3^+(\text{aq}) + \text{OH}^-(\text{aq})$	3.9×10^{-10}

*The carbonate and bicarbonate ions must occur with a positively charged ion such as Na^+ that serves to balance the charge but does not have any part in the ionization reaction. For example, it is the bicarbonate ion that makes sodium bicarbonate (NaHCO_3) basic. We look more closely at ionic bases in Section 16.9.

Finding the $[\text{OH}^-]$ and pH of Basic Solutions

Finding the $[\text{OH}^-]$ and pH of a strong base solution is relatively straightforward, as shown in Example 16.11. As we did in calculating the $[\text{H}_3\text{O}^+]$ in strong acid solutions, we can neglect the contribution of the autoionization of water to the $[\text{OH}^-]$ and focus solely on the strong base itself.

EXAMPLE 16.11

Finding the $[\text{OH}^-]$ and pH of a Strong Base Solution

What are the OH^- concentration and pH in each solution?

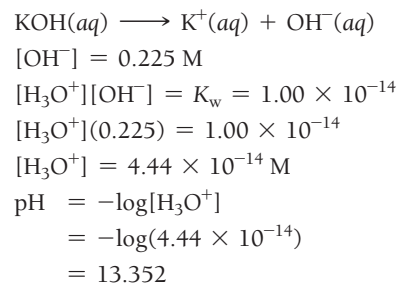
- (a) 0.225 M KOH (b) 0.0015 M $\text{Sr}(\text{OH})_2$

SOLUTION

- (a) Since KOH is a strong base, it completely dissociates into K^+ and OH^- in solution. The concentration of OH^- is therefore the same as the given concentration of KOH.

Use this concentration and K_w to find $[\text{H}_3\text{O}^+]$.

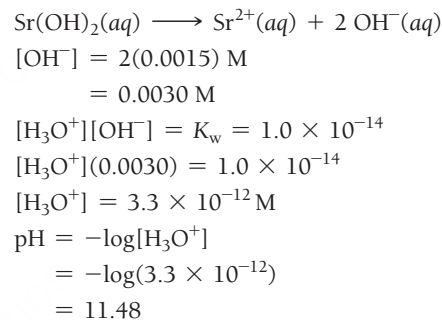
Then substitute $[\text{H}_3\text{O}^+]$ into the pH expression to find the pH.



- (b) Since $\text{Sr}(\text{OH})_2$ is a strong base, it completely dissociates into 1 mol of Sr^{2+} and 2 mol of OH^- in solution. The concentration of OH^- is therefore twice the given concentration of $\text{Sr}(\text{OH})_2$.

Use this concentration and K_w to find $[\text{H}_3\text{O}^+]$.

Substitute $[\text{H}_3\text{O}^+]$ into the pH expression to find the pH.



FOR PRACTICE 16.11

Find the $[\text{OH}^-]$ and pH of a 0.010 M $\text{Ba}(\text{OH})_2$ solution.

Finding the $[\text{OH}^-]$ and pH of a *weak base* solution is analogous to finding the $[\text{H}_3\text{O}^+]$ and pH of a weak acid. Similarly, we can neglect the contribution of the autoionization of water to the $[\text{OH}^-]$ and focus solely on the weak base itself. We find the contribution of the weak base by preparing an ICE table showing the relevant concentrations of all species and then use the base ionization constant expression to find the $[\text{OH}^-]$. Example 16.12 demonstrates how to find the $[\text{OH}^-]$ and pH of a weak base solution.

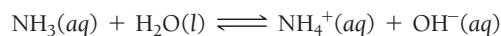
EXAMPLE 16.12

Finding the $[\text{OH}^-]$ and pH of a Weak Base Solution

Find the $[\text{OH}^-]$ and pH of a 0.100 M NH_3 solution.

SOLUTION

1. Write the balanced equation for the ionization of water by the base and use it as a guide to prepare an ICE table showing the given concentration of the weak base as its initial concentration. Leave room in the table for the changes in concentrations and for the equilibrium concentrations. (Note that you should list the OH^- concentration as approximately zero. Although a little OH^- is present from the autoionization of water, this amount is negligibly small compared to the amount of OH^- formed by the base.)

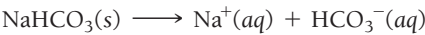


	$[\text{NH}_3]$	$[\text{NH}_4^+]$	$[\text{OH}^-]$
Initial	0.100	0.00	≈ 0.00
Change			
Equil			

Interactive
Worked Example
Video 16.12

PEARSON
eText
2.0

of bicarbonate is sodium bicarbonate. Like all soluble salts, sodium bicarbonate dissociates in solution to form a sodium cation and bicarbonate anion:



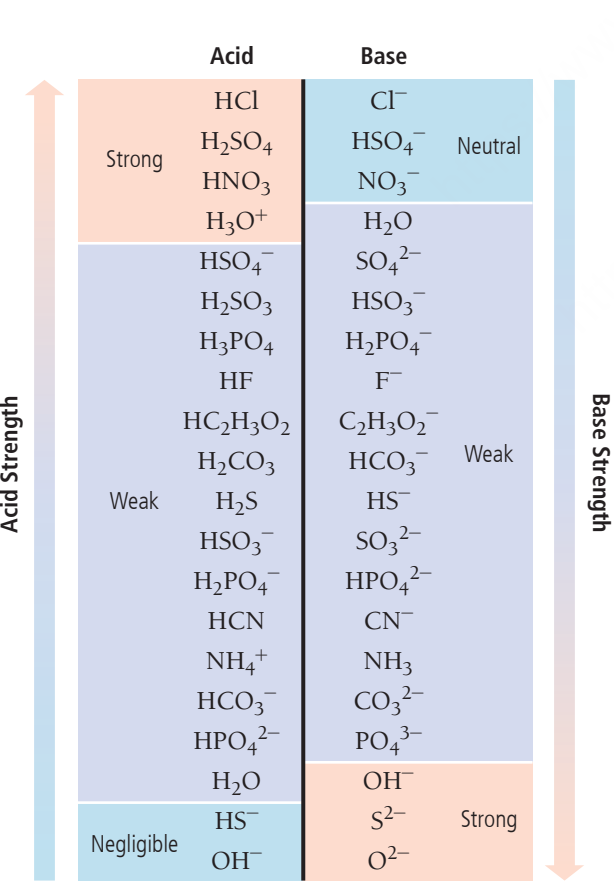
The sodium ion has neither acidic nor basic properties (it does not ionize water), as we will see shortly. The bicarbonate ion, by contrast, acts as a weak base, ionizing water as just shown to form a basic solution. Consequently, the pH of a sodium bicarbonate solution is above 7 (the solution is basic).

In this section, we consider some of the acid–base properties of salts and the ions they contain. Some salts are pH-neutral when put into water, others are acidic, and still others are basic, depending on their constituent anions and cations. In general, anions tend to form either basic or neutral solutions, while cations tend to form either *acidic* or neutral solutions.

Anions as Weak Bases

We can think of any anion as the conjugate base of an acid. Consider the following anions and their corresponding acids:

This anion	is the conjugate base of	this acid
Cl [−]		HCl
F [−]		HF
NO ₃ [−]		HNO ₃
C ₂ H ₃ O ₂ [−]		HC ₂ H ₃ O ₂




▲ **FIGURE 16.12** Strength of Conjugate Acid–Base Pairs The stronger an acid, the weaker is its conjugate base.


In general, the anion A[−] is the conjugate base of the acid HA. Since every anion can be regarded as the conjugate base of an acid, every anion itself can potentially act as a base. However, *not every anion does act as a base*—it depends on the strength of the corresponding acid. In general:

- An anion that is the conjugate base of a *weak acid* is itself a *weak base*.
- An anion that is the conjugate base of a *strong acid* is pH-neutral (forms solutions that are neither acidic nor basic).


For example, the Cl[−] anion is the conjugate base of HCl, a strong acid. Therefore, the Cl[−] anion is pH-neutral (neither acidic nor basic). The F[−] anion, however, is the conjugate base of HF, a weak acid. Therefore, the F[−] ion is itself a weak base and ionizes water according to the reaction:



We can understand why the conjugate base of a weak acid is basic by asking why an acid is weak to begin with. Hydrofluoric acid is a weak acid because, as we saw in Section 16.4, the HF bond is particularly strong. Therefore, the following reaction lies to the left:



The strength of the HF bond causes the F[−] ion to have significant affinity for H⁺ ions. Consequently, when F[−] is put into water, its affinity for H⁺ ions allows it to remove H⁺ ions from water molecules, thus acting as a weak base. In general, as shown in **Figure 16.12** ◀, the weaker the acid, the stronger the conjugate base. In contrast, the conjugate base of a strong acid, such as Cl[−], does not act as a base because the HCl bond is weaker than the HF bond reaction; as a result, this reaction lies far to the right:



The Cl[−] ion has a relatively lower affinity for H⁺ ions. Consequently, when Cl[−] is put into water, it does not remove H⁺ ions from water molecules.

EXAMPLE 16.13**Determining Whether an Anion Is Basic or pH-Neutral**

Classify each anion as a weak base or pH-neutral.

- (a) NO_3^-
- (b) NO_2^-
- (c) $\text{C}_2\text{H}_3\text{O}_2^-$

SOLUTION


- (a) From Table 16.3, you can see that NO_3^- is the conjugate base of a *strong* acid (HNO_3) and is therefore pH-neutral.
- (b) From Table 16.5 (or from its absence in Table 16.3), you know that NO_2^- is the conjugate base of a weak acid (HNO_2) and is therefore a weak base.
- (c) From Table 16.5 (or from its absence in Table 16.3), you know that $\text{C}_2\text{H}_3\text{O}_2^-$ is the conjugate base of a weak acid ($\text{HC}_2\text{H}_3\text{O}_2$) and is therefore a weak base.

FOR PRACTICE 16.13

Classify each anion as a weak base or pH-neutral.


- (a) CHO_2^-
- (b) ClO_4^-

We can determine the pH of a solution containing an anion that acts as a weak base in a manner similar to how we determine the pH of any weak base solution. However, we need to know K_b for the anion acting as a base, which we can readily determine from K_a of the corresponding acid. Recall from Section 16.5 the expression for K_a for a generic acid HA:



$$K_a = \frac{[\text{H}_3\text{O}^+][\text{A}^-]}{[\text{HA}]}$$

Similarly, the expression for K_b for the conjugate base (A^-) is:



$$K_b = \frac{[\text{OH}^-][\text{HA}]}{[\text{A}^-]}$$

If we multiply the expressions for K_a and K_b we get K_w :

$$K_a \times K_b = \frac{[\text{H}_3\text{O}^+][\text{A}^-][\text{OH}^-][\text{HA}]}{[\text{HA}][\text{A}^-]} = [\text{H}_3\text{O}^+][\text{OH}^-] = K_w$$

Or simply,

$$K_a \times K_b = K_w$$

The product of K_a for an acid and K_b for its conjugate base is K_w (1.0×10^{-14} at 25°C). Consequently, we can find K_b for an anion acting as a base from the value of K_a for the corresponding conjugate acid.

For example, for acetic acid ($\text{HC}_2\text{H}_3\text{O}_2$), $K_a = 1.8 \times 10^{-5}$. We calculate K_b for the conjugate base ($\text{C}_2\text{H}_3\text{O}_2^-$) by substituting into the equation:

$$K_a \times K_b = K_w$$

$$K_b = \frac{K_w}{K_a} = \frac{1.0 \times 10^{-14}}{1.8 \times 10^{-5}} = 5.6 \times 10^{-10}$$

Knowing K_b , we can find the pH of a solution containing an anion acting as a base, as demonstrated in Example 16.14.

EXAMPLE 16.14

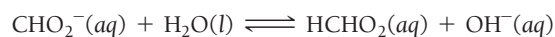
Finding the pH of a Solution Containing an Anion Acting as a Base

Interactive
Worked Example
Video 16.14PEARSON
eText
2.0

Find the pH of a 0.100 M NaCHO_2 solution. The salt completely dissociates into $\text{Na}^+(aq)$ and $\text{CHO}_2^-(aq)$, and the Na^+ ion has no acid or base properties.

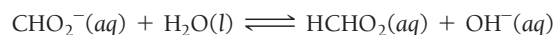
SOLUTION

1. Since the Na^+ ion does not have any acidic or basic properties, you can ignore it. Write the balanced equation for the ionization of water by the basic anion and use it as a guide to prepare an ICE table showing the given concentration of the weak base as its initial concentration.



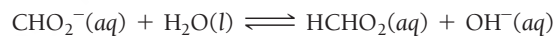
	$[\text{CHO}_2^-]$	$[\text{HCHO}_2]$	$[\text{OH}^-]$
Initial	0.100	0.00	≈ 0.00
Change			
Equil			

2. Represent the change in the concentration of OH^- with the variable x . Define the changes in the concentrations of the other reactants and products in terms of x .



	$[\text{CHO}_2^-]$	$[\text{HCHO}_2]$	$[\text{OH}^-]$
Initial	0.100	0.00	≈ 0.00
Change	$-x$	$+x$	$+x$
Equil			

3. Sum each column to determine the equilibrium concentrations in terms of the initial concentrations and the variable x .



	$[\text{CHO}_2^-]$	$[\text{HCHO}_2]$	$[\text{OH}^-]$
Initial	0.100	0.00	≈ 0.00
Change	$-x$	$+x$	$+x$
Equil	$0.100 - x$	x	x

4. Find K_b from K_a (for the conjugate acid from Table 16.5).

Substitute the expressions for the equilibrium concentrations (from Step 3) into the expression for K_b . In many cases, you can make the approximation that x is *small*.

Substitute the value of K_b into the K_b expression and solve for x .

Confirm that the x is *small* approximation is valid by calculating the ratio of x to the number it was subtracted from in the approximation. The ratio should be less than 0.05 (or 5%).

$$K_a \times K_b = K_w$$

$$K_b = \frac{K_w}{K_a} = \frac{1.0 \times 10^{-14}}{1.8 \times 10^{-4}} = 5.6 \times 10^{-11}$$

$$K_b = \frac{[\text{HCHO}_2][\text{OH}^-]}{[\text{CHO}_2^-]}$$

$$= \frac{x^2}{0.100 - x} \quad (x \text{ is small})$$

$$5.6 \times 10^{-11} = \frac{x^2}{0.100}$$

$$x = 2.4 \times 10^{-6}$$

$$\frac{2.4 \times 10^{-6}}{0.100} \times 100\% = 0.0024\%$$

Therefore the approximation is valid.

5. Determine the OH^- concentration from the calculated value of x .

Use the expression for K_w to find $[\text{H}_3\text{O}^+]$.

Substitute $[\text{H}_3\text{O}^+]$ into the pH equation to find pH.

$$[\text{OH}^-] = 2.4 \times 10^{-6} \text{ M}$$

$$[\text{H}_3\text{O}^+][\text{OH}^-] = K_w = 1.0 \times 10^{-14}$$

$$[\text{H}_3\text{O}^+](2.4 \times 10^{-6}) = 1.0 \times 10^{-14}$$

$$[\text{H}_3\text{O}^+] = 4.2 \times 10^{-9} \text{ M}$$

$$\text{pH} = -\log[\text{H}_3\text{O}^+]$$

$$= -\log(4.2 \times 10^{-9}) = 8.38$$

FOR PRACTICE 16.14

Find the pH of a 0.250 M $\text{NaC}_2\text{H}_3\text{O}_2$ solution.

We can also express the relationship between K_a and K_b in terms of pK_a and pK_b . By taking the log of both sides of $K_a \times K_b = K_w$, we get:

$$\begin{aligned}\log(K_a \times K_b) &= \log K_w \\ \log K_a + \log K_b &= \log K_w\end{aligned}$$

Because $K_w = 10^{-14}$, we can rearrange the equation to get:

$$\log K_a + \log K_b = \log 10^{-14} = -14$$

Rearranging further:

$$-\log K_a - \log K_b = 14$$

Because $-\log K = pK$, we get:

$$pK_a + pK_b = 14$$

Cations as Weak Acids

In contrast to anions, which in some cases act as weak bases, cations can, in some cases, act as *weak acids*. We can generally divide cations into three categories: cations that are the counterions of strong bases; cations that are the conjugate acids of *weak* bases; and cations that are small, highly charged metals. We examine each individually.

Cations That Are the Counterions of Strong Bases Strong bases such as NaOH or $\text{Ca}(\text{OH})_2$ generally contain hydroxide ions and a counterion. In solution, a strong base completely dissociates to form $\text{OH}^-(aq)$ and the solvated (in solution) counterion. Although these counterions interact with water molecules via ion–dipole forces, they do not ionize water and they do not contribute to the acidity or basicity of the solution. *In general, cations that are the counterions of strong bases are themselves pH-neutral* (they form solutions that are neither acidic nor basic). For example, Na^+ , K^+ , and Ca^{2+} are the counterions of the strong bases NaOH, KOH, and $\text{Ca}(\text{OH})_2$ and are therefore themselves pH-neutral.

Cations That Are the Conjugate Acids of Weak Bases A cation can be formed from any non-ionic weak base by adding a proton (H^+) to its formula. The cation is the conjugate acid of the base. Consider the following cations and their corresponding weak bases:

This cation	is the conjugate acid of	this weak base
NH_4^+		NH_3
$\text{C}_2\text{H}_5\text{NH}_3^+$		$\text{C}_2\text{H}_5\text{NH}_2$
CH_3NH_3^+		CH_3NH_2

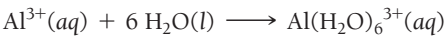
Any of these cations, with the general formula BH^+ , acts as a weak acid according to the equation:



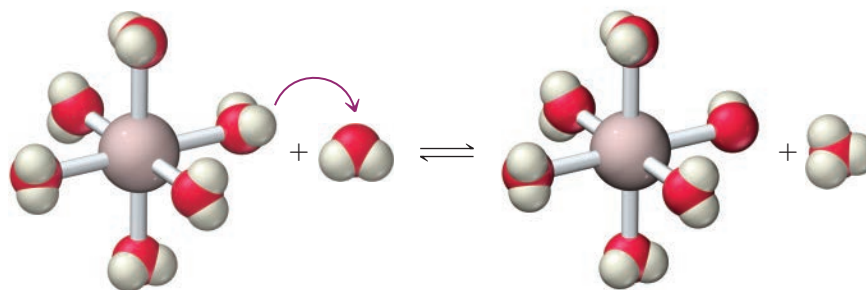

In general, *a cation that is the conjugate acid of a weak base is a weak acid*.

We can calculate the pH of a solution containing the conjugate acid of a weak base just like that of any other weakly acidic solution. However, the value of K_a for the acid must be derived from K_b using the previously derived relationship: $K_a \times K_b = K_w$.

Cations That Are Small, Highly Charged Metals *Small, highly charged metal cations such as Al^{3+} and Fe^{3+} form weakly acidic solutions.* For example, when Al^{3+} is dissolved in water, it becomes hydrated according to the equation:



The hydrated form of the ion then acts as a Brønsted–Lowry acid:



Neither the alkali metal cations nor the alkaline earth metal cations ionize water in this way, but the cations of many other metals do. The smaller and more highly charged the cation, the more acidic its behavior.

EXAMPLE 16.15

Determining Whether a Cation Is Acidic or pH-Neutral

Classify each cation as a weak acid or pH-neutral.

- (a) $\text{C}_5\text{H}_5\text{NH}^+$ (b) Ca^{2+} (c) Cr^{3+}

SOLUTION

- (a) The $\text{C}_5\text{H}_5\text{NH}^+$ cation is the conjugate acid of a weak base and is therefore a weak acid.
 (b) The Ca^{2+} cation is the counterion of a strong base and is therefore pH-neutral (neither acidic nor basic).
 (c) The Cr^{3+} cation is a small, highly charged metal cation and is therefore a weak acid.

FOR PRACTICE 16.15

Classify each cation as a weak acid or pH-neutral.

- (a) Li^+ (b) CH_3NH_3^+ (c) Fe^{3+}

Classifying Salt Solutions as Acidic, Basic, or Neutral

Since salts contain both a cation and an anion, they can form acidic, basic, or neutral solutions when dissolved in water. The pH of the solution depends on the specific cation and anion involved. We examine the four possibilities individually.

1. Salts in which neither the cation nor the anion acts as an acid or a base form pH-neutral solutions.

A salt in which the cation is the counterion of a strong base and in which the anion is the conjugate base of a strong acid forms a *neutral* solution. Some salts in this category include:

NaCl sodium chloride	$\text{Ca}(\text{NO}_3)_2$ calcium nitrate	KBr potassium bromide
Cations are pH-neutral.		Anions are conjugate bases of strong acids.

2. Salts in which the cation does not act as an acid and the anion acts as a base form basic solutions.

A salt in which the cation is the counterion of a strong base and in which the anion is the conjugate base of a *weak* acid forms a *basic* solution. Salts in this category include:

NaF sodium fluoride	$\text{Ca}(\text{C}_2\text{H}_3\text{O}_2)_2$ calcium acetate	KNO_2 potassium nitrite
Cations are pH-neutral.		Anions are conjugate bases of weak acids.

3. Salts in which the cation acts as an acid and the anion does not act as a base form acidic solutions. A salt in which the cation is either the conjugate acid of a weak base or a small, highly charged metal ion and in which the anion is the conjugate base of a *strong* acid forms an *acidic* solution. Salts in this category include:

FeCl_3

iron(III) chloride

$\text{Al}(\text{NO}_3)_3$

aluminum nitrate

NH_4Br

ammonium bromide

Cations are conjugate acids of weak bases or small, highly charged metal ions.

Anions are conjugate bases of *strong* acids.

4. Salts in which the cation acts as an acid and the anion acts as a base form solutions in which the pH depends on the relative strengths of the acid and the base. A salt in which the cation is either the conjugate acid of a weak base or a small, highly charged metal ion and in which the anion is the conjugate base of a *weak* acid forms a solution in which the pH depends on the relative strengths of the acid and base. Salts in this category include:

FeF_3

iron(III) fluoride

$\text{Al}(\text{C}_2\text{H}_3\text{O}_2)_3$

aluminum acetate

NH_4NO_2

ammonium nitrite

Cations are conjugate acids of weak bases or small, highly charged metal ions.

Anions are conjugate bases of *weak* acids.

We can determine the overall pH of a solution containing one of these salts by comparing the K_a of the acid to the K_b of the base—the ion with the higher value of K dominates and determines whether the solution will be acidic or basic, as shown in part e of Example 16.16. Table 16.9 summarizes these possibilities.

TABLE 16.9 pH of Salt Solutions

CATION		ANION	
		Conjugate base of strong acid	Conjugate base of weak acid
		Acidic	Depends on relative strengths
		Acidic	Depends on relative strengths
		Neutral	Basic

EXAMPLE 16.16

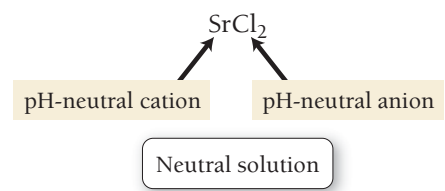
Determining the Overall Acidity or Basicity of Salt Solutions

Determine if the solution formed by each salt is acidic, basic, or neutral.

- (a) SrCl_2
- (b) AlBr_3
- (c) $\text{CH}_3\text{NH}_3\text{NO}_3$
- (d) NaCHO_2
- (e) NH_4F

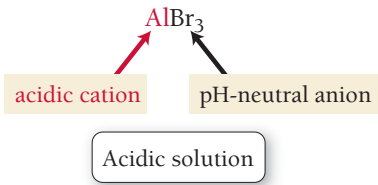
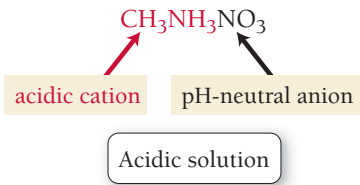
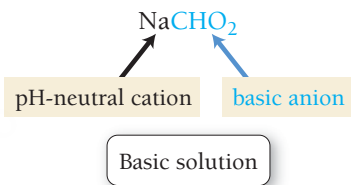
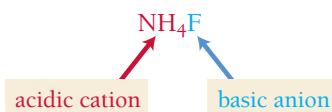
SOLUTION

- (a) The Sr^{2+} cation is the counterion of a strong base $[\text{Sr}(\text{OH})_2]$ and is pH-neutral. The Cl^- anion is the conjugate base of a strong acid (HCl) and is pH-neutral as well. The SrCl_2 solution is therefore pH-neutral (neither acidic nor basic).



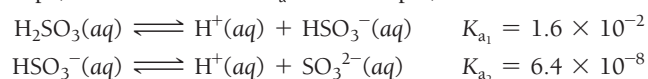
—Continued on the next page

Continued from the previous page—

<p>(b) The Al^{3+} cation is a small, highly charged metal ion (that is not an alkali metal or an alkaline earth metal) and is a weak acid. The Br^- anion is the conjugate base of a strong acid (HBr) and is pH-neutral. The AlBr_3 solution is therefore acidic.</p>	
<p>(c) The CH_3NH_3^+ ion is the conjugate acid of a weak base (CH_3NH_2) and is acidic. The NO_3^- anion is the conjugate base of a strong acid (HNO_3) and is pH-neutral. The $\text{CH}_3\text{NH}_3\text{NO}_3$ solution is therefore acidic.</p>	
<p>(d) The Na^+ cation is the counterion of a strong base and is pH-neutral. The CHO_2^- anion is the conjugate base of a weak acid and is basic. The NaCHO_2 solution is therefore basic.</p>	
<p>(e) The NH_4^+ ion is the conjugate acid of a weak base (NH_3) and is acidic. The F^- ion is the conjugate base of a weak acid and is basic. To determine the overall acidity or basicity of the solution, compare the values of K_a for the acidic cation and K_b for the basic anion. Obtain each value of K from the conjugate by using $K_a \times K_b = K_w$.</p> <p>Since K_a is greater than K_b, the solution is acidic.</p>	 $K_a(\text{NH}_4^+) = \frac{K_w}{K_b(\text{NH}_3)} = \frac{1.0 \times 10^{-14}}{1.76 \times 10^{-5}} = 5.68 \times 10^{-10}$ $K_b(\text{F}^-) = \frac{K_w}{K_a(\text{HF})} = \frac{1.0 \times 10^{-14}}{6.8 \times 10^{-4}} = 1.5 \times 10^{-11}$ $K_a > K_b$ <div style="border: 1px solid black; border-radius: 10px; padding: 5px; width: fit-content; margin: 10px auto;">Acidic solution</div>
<p>FOR PRACTICE 16.16</p> <p>Determine if the solution formed by each salt is acidic, basic, or neutral.</p> <p>(a) NaHCO_3 (b) $\text{CH}_3\text{CH}_2\text{NH}_3\text{Cl}$ (c) KNO_3 (d) $\text{Fe}(\text{NO}_3)_3$</p>	

16.10 Polyprotic Acids

In Section 16.5, we stated that some acids, called polyprotic acids, contain two or more ionizable protons. Recall that sulfurous acid (H_2SO_3) is a diprotic acid containing two ionizable protons and that phosphoric acid (H_3PO_4) is a triprotic acid containing three ionizable protons. Typically, a **polyprotic acid** ionizes in successive steps, each with its own K_a . For example, sulfurous acid ionizes in two steps:



K_{a1} is the acid ionization constant for the first step, and K_{a2} is the acid ionization constant for the second step. Notice that K_{a2} is smaller than K_{a1} . This is true for all polyprotic acids and makes sense because the first proton separates from a neutral molecule, while the second must separate from an anion. The negatively charged anion holds the positively charged proton more tightly, making the proton more difficult to remove and resulting in a smaller value of K_a .

Table 16.10 lists some common polyprotic acids and their acid ionization constants. Notice that in all cases, the value of K_a for each step becomes successively smaller. The value of K_{a1} for sulfuric acid is listed as strong because sulfuric acid is strong in the first step and weak in the second.

TABLE 16.10 Common Polyprotic Acids and Ionization Constants

Name (Formula)	Structure	Space-filling model	K_{a1}	K_{a2}	K_{a3}
Sulfuric Acid (H_2SO_4)			Strong	1.2×10^{-2}	
Oxalic Acid ($H_2C_2O_4$)			6.0×10^{-2}	6.1×10^{-5}	
Sulfurous Acid (H_2SO_3)			1.6×10^{-2}	6.4×10^{-8}	
Phosphoric Acid (H_3PO_4)			7.5×10^{-3}	6.2×10^{-8}	4.2×10^{-13}
Citric Acid ($H_3C_6H_5O_7$)			7.4×10^{-4}	1.7×10^{-5}	4.0×10^{-7}
Ascorbic Acid ($H_2C_6H_6O_6$)			8.0×10^{-5}	1.6×10^{-12}	
Carbonic Acid (H_2CO_3)			4.3×10^{-7}	5.6×10^{-11}	

Finding the pH of Polyprotic Acid Solutions

Finding the pH of a polyprotic acid solution is less difficult than we might first imagine because, for most polyprotic acids, K_{a1} is much larger than K_{a2} (or K_{a3} for triprotic acids). Therefore, the amount of H_3O^+ formed by the first ionization step is much larger than that formed by the second or third ionization step.

In addition, the formation of H_3O^+ in the first step inhibits the formation of additional H_3O^+ in the second step (because of Le Châtelier’s principle). Consequently, we treat most polyprotic acid solutions as if the first step were the only one that contributes to the H_3O^+ concentration, as demonstrated in Example 16.17. A major exception is a dilute solution of sulfuric acid, which we examine in Example 16.18.

EXAMPLE 16.17

Finding the pH of a Polyprotic Acid Solution


Find the pH of a 0.100 M ascorbic acid ($\text{H}_2\text{C}_6\text{H}_6\text{O}_6$) solution.

SOLUTION

To find the pH, you must find the equilibrium concentration of H_3O^+ . Treat the problem as a weak acid pH problem with a single ionizable proton. The second proton contributes a negligible amount to the concentration of H_3O^+ and can be ignored. Follow the procedure from Example 16.6, shown in condensed form here. Use K_{a1} for ascorbic acid from Table 16.10.

Confirm that the x is *small* approximation is valid by calculating the ratio of x to the number it was subtracted from in the approximation. The ratio should be less than 0.05 (or 5%).

Calculate the pH from the H_3O^+ concentration.



	$[\text{H}_2\text{C}_6\text{H}_6\text{O}_6]$	$[\text{H}_3\text{O}^+]$	$[\text{HC}_6\text{H}_6\text{O}_6^-]$
Initial	0.100	≈ 0.00	0.000
Change	$-x$	$+x$	$+x$
Equil	$0.100 - x$	x	x

$$K_{a1} = \frac{[\text{H}_3\text{O}^+][\text{HC}_6\text{H}_6\text{O}_6^-]}{[\text{H}_2\text{C}_6\text{H}_6\text{O}_6]}$$
$$= \frac{x^2}{0.100 - x} \quad (x \text{ is small})$$
$$8.0 \times 10^{-5} = \frac{x^2}{0.100}$$
$$x = 2.8 \times 10^{-3}$$
$$\frac{2.8 \times 10^{-3}}{0.100} \times 100\% = 2.8\%$$

The approximation is valid. Therefore,

$$[\text{H}_3\text{O}^+] = 2.8 \times 10^{-3} \text{ M}$$
$$\text{pH} = -\log(2.8 \times 10^{-3}) = 2.55$$

FOR PRACTICE 16.17

Find the pH of a 0.050 M H_2CO_3 solution.

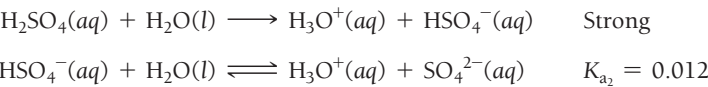
EXAMPLE 16.18

Finding the pH of a Dilute H_2SO_4 Solution

Find the pH of a 0.0100 M sulfuric acid (H_2SO_4) solution.

SOLUTION

Sulfuric acid is strong in its first ionization step and weak in its second. Begin by writing the equations for the two steps. As the concentration of an H_2SO_4 solution becomes smaller, the second ionization step becomes more significant because the percent ionization increases (as discussed in Section 16.7). Therefore, for a concentration of 0.0100 M, you can’t neglect the H_3O^+ contribution from the second step, as you can for other polyprotic acids. You must calculate the H_3O^+ contributions from both steps.



The $[H_3O^+]$ that results from the first ionization step is 0.0100 M (because the first step is strong). To determine the $[H_3O^+]$ formed by the second step, prepare an ICE table for the second step in which the initial concentration of H_3O^+ is 0.0100 M. The initial concentration of HSO_4^- must also be 0.0100 M (due to the stoichiometry of the ionization reaction).

	$[HSO_4^-]$	$[H_3O^+]$	$[SO_4^{2-}]$
Initial	0.0100	≈ 0.0100	0.000
Change	$-x$	$+x$	$+x$
Equil	$0.0100 - x$	$0.0100 + x$	x

Substitute the expressions for the equilibrium concentrations (from the table in the previous step) into the expression for K_{a_2} . In this case, you cannot make the x is *small* approximation because the equilibrium constant (0.012) is *not small* relative to the initial concentration (0.0100).

Substitute the value of K_{a_2} and multiply out the expression to arrive at the standard quadratic form.

$$K_{a_2} = \frac{[H_3O^+][SO_4^{2-}]}{[HSO_4^-]}$$
$$= \frac{(0.0100 + x)x}{0.0100 - x}$$
$$0.012 = \frac{0.0100x + x^2}{0.0100 - x}$$
$$0.012(0.0100 - x) = 0.0100x + x^2$$
$$0.00012 - 0.012x = 0.0100x + x^2$$
$$x^2 + 0.022x - 0.00012 = 0$$

Solve the quadratic equation using the quadratic formula.

$$x = \frac{-b \pm \sqrt{b^2 - 4ac}}{2a}$$
$$= \frac{-(0.022) \pm \sqrt{(0.022)^2 - 4(1)(-0.00012)}}{2(1)}$$
$$= \frac{-0.022 \pm 0.031}{2}$$
$$x = -0.027 \text{ or } x = 0.0045$$

Since x represents a concentration and since concentrations cannot be negative, we reject the negative root.

$$x = 0.0045$$

Determine the H_3O^+ concentration from the calculated value of x and calculate the pH. Notice that the second step produces almost half as much H_3O^+ as the first step—an amount that must not be neglected. This will always be the case with dilute H_2SO_4 solutions.

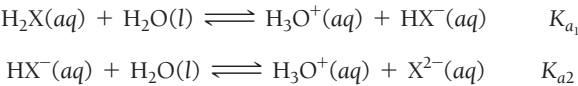
$$[H_3O^+] = 0.0100 + x$$
$$= 0.0100 + 0.0045$$
$$= 0.0145 \text{ M}$$
$$\text{pH} = -\log[H_3O^+]$$
$$= -\log(0.0145)$$
$$= 1.84$$

FOR PRACTICE 16.18

Find the pH and $[SO_4^{2-}]$ of a 0.0075 M sulfuric acid solution.

Finding the Concentration of the Anions for a Weak Diprotic Acid Solution

In some cases, we may want to know the concentrations of the anions formed by a polyprotic acid. Consider the following generic polyprotic acid H_2X and its ionization steps:



In Examples 16.17 and 16.18, we illustrated how to find the concentration of H_3O^+ for such a solution, which is equal to the concentration of HX^- . What if instead we needed to find the concentration of X^{2-} ? To find the concentration of X^{2-} , we use the concentration of HX^- and H_3O^+ (from the first ionization step) as the initial concentrations for the second ionization step. We then solve a second equilibrium problem using the second ionization equation and K_{a_2} , as demonstrated in Example 16.19.


EXAMPLE 16.19

Finding the Concentration of the Anions for a Weak Diprotic Acid Solution

Find the $[\text{C}_6\text{H}_6\text{O}_6^{2-}]$ of the 0.100 M ascorbic acid ($\text{H}_2\text{C}_6\text{H}_6\text{O}_6$) solution in Example 16.17.

SOLUTION

To find the $[\text{C}_6\text{H}_6\text{O}_6^{2-}]$, use the concentrations of $[\text{HC}_6\text{H}_6\text{O}_6^-]$ and H_3O^+ produced by the first ionization step (as calculated in Example 16.17) as the initial concentrations for the second step. Because of the 1:1 stoichiometry, $[\text{HC}_6\text{H}_6\text{O}_6^-] = [\text{H}_3\text{O}^+]$. Then solve an equilibrium problem for the second step similar to that of Example 16.6, shown in condensed form here. Use K_{a_2} for ascorbic acid from Table 16.10.



	$[\text{HC}_6\text{H}_6\text{O}_6^-]$	$[\text{H}_3\text{O}^+]$	$[\text{C}_6\text{H}_6\text{O}_6^{2-}]$
Initial	2.8×10^{-3}	2.8×10^{-3}	+0.000
Change	$-x$	$+x$	$+x$
Equil	$2.8 \times 10^{-3} - x$	$2.8 \times 10^{-3} + x$	x

$$\begin{aligned} K_{a_2} &= \frac{[\text{H}_3\text{O}^+][\text{C}_6\text{H}_6\text{O}_6^{2-}]}{[\text{HC}_6\text{H}_6\text{O}_6^-]} \\ &= \frac{(2.8 \times 10^{-3} + x)x}{2.8 \times 10^{-3} - x} \quad (x \text{ is small}) \\ &= \frac{(2.8 \times 10^{-3})x}{2.8 \times 10^{-3}} \end{aligned}$$

$$x = K_{a_2} = 1.6 \times 10^{-12}$$

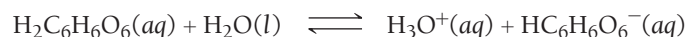
Since x is much smaller than 2.8×10^{-3} , the x is *small* approximation is valid. Therefore, $[\text{C}_6\text{H}_6\text{O}_6^{2-}] = 1.6 \times 10^{-12}$ M.

FOR PRACTICE 16.19

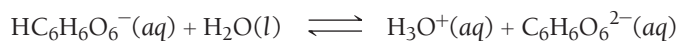
Find the $[\text{CO}_3^{2-}]$ of the 0.050 M carbonic acid (H_2CO_3) solution in For Practice 16.17.

Notice from the results of Example 16.19 that the concentration of X^{2-} for a weak diprotic acid H_2X is equal to K_{a_2} . This general result applies to all diprotic acids in which the x is *small* approximation is valid. Notice also that the concentration of H_3O^+ produced by the second ionization step of a diprotic acid is very small compared to the concentration produced by the first step, as shown in **Figure 16.13** ▼.

Dissociation of a Polyprotic Acid




$$[\text{H}_3\text{O}^+] = 2.8 \times 10^{-3} \text{ M}$$



$$[\text{H}_3\text{O}^+] = 1.6 \times 10^{-12} \text{ M}$$

$$\text{Total } [\text{H}_3\text{O}^+] = 2.8 \times 10^{-3} \text{ M} + 1.6 \times 10^{-12} \text{ M}$$

$$= 2.8 \times 10^{-3} \text{ M}$$



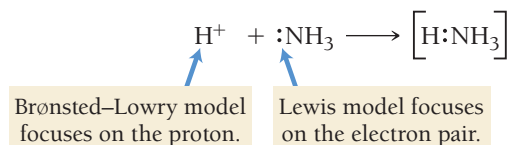
0.100 M $\text{H}_2\text{C}_6\text{H}_6\text{O}_6$

► **FIGURE 16.13** **Dissociation of a Polyprotic Acid** A 0.100 M $\text{H}_2\text{C}_6\text{H}_6\text{O}_6$ solution contains an H_3O^+ concentration of 2.8×10^{-3} M from the first step. The amount of H_3O^+ contributed by the second step is only 1.6×10^{-12} M, which is insignificant compared to the amount produced by the first step.

16.11 Lewis Acids and Bases

We began our definitions of acids and bases with the Arrhenius model. We then saw how the Brønsted–Lowry model, by introducing the concept of a proton donor and proton acceptor, expanded the range of substances that we consider acids and bases. We now introduce a third model, which further broadens the range of substances that we can consider acids. This third model is the *Lewis model*, named after G. N. Lewis, the American chemist who devised the electron-dot representation of chemical bonding (Section 4.4). While the Brønsted–Lowry model focuses on the transfer of a proton, the Lewis model focuses on the donation of an electron pair.

Consider the simple acid–base reaction between the H^+ ion and NH_3 , shown here with Lewis structures:



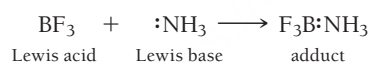
According to the Brønsted–Lowry model, the ammonia accepts a proton, thus acting as a base. According to the Lewis model, the ammonia acts as a base by *donating an electron pair*. The general definitions of acids and bases according to the Lewis model focus on the electron pair:

Lewis acid: Electron pair acceptor

Lewis base: Electron pair donor

According to the Lewis definition, H^+ in the above reaction is acting as an acid because it is accepting an electron pair from NH_3 . NH_3 is acting as a Lewis base because it is donating an electron pair to H^+ .

Although the Lewis model does not significantly expand the substances that can be considered bases—because all proton acceptors must have an electron pair to bind the proton—it does significantly expand the substances that can be considered acids. According to the Lewis model, a substance doesn't even need to contain hydrogen to be an acid. For example, consider the gas-phase reaction between boron trifluoride and ammonia shown here:



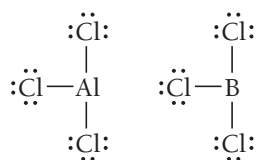
Boron trifluoride has an empty orbital that can accept the electron pair from ammonia and form the product (the product of a Lewis acid–base reaction is sometimes called an *adduct*). The above reaction demonstrates an important property of Lewis acids:

A Lewis acid has an empty orbital (or can rearrange electrons to create an empty orbital) that can accept an electron pair.

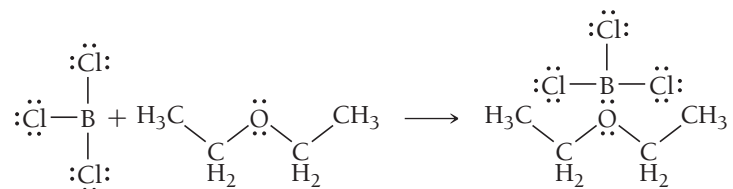
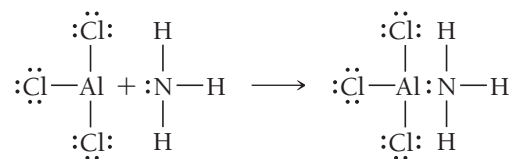
Consequently, the Lewis definition subsumes a whole new class of acids. Next we examine a few examples.

Molecules That Act as Lewis Acids

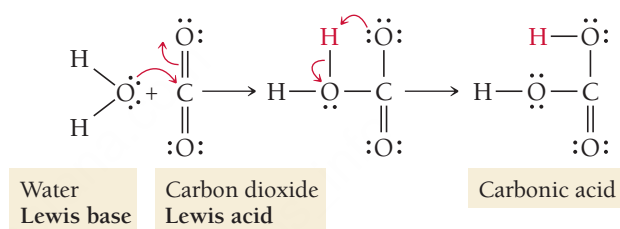
Since molecules with incomplete octets have empty orbitals, they can serve as Lewis acids. For example, both AlCl_3 and BCl_3 have incomplete octets:



These both act as Lewis acids, as shown in the following reactions:



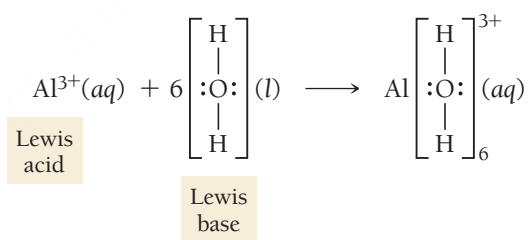
Some molecules that may not initially contain empty orbitals can rearrange their electrons to act as Lewis acids. Consider the reaction between carbon dioxide and water:



The electrons in the double bond on carbon move to the terminal oxygen atom, allowing carbon dioxide to act as a Lewis acid by accepting an electron pair from water. The molecule then undergoes a rearrangement in which the hydrogen atom shown in red bonds with the terminal oxygen atom instead of the internal one.

Cations That Act as Lewis Acids

Some cations, since they are positively charged and have lost some electrons, have empty orbitals that allow them to also act as Lewis acids. Consider the hydration process of the Al^{3+} ion discussed in Section 16.9 shown here:




The aluminum ion acts as a Lewis acid, accepting lone pairs from six water molecules to form the hydrated ion. Many other small, highly charged metal ions also act as Lewis acids in this way.

SELF-ASSESSMENT

QUIZ



1. Identify the conjugate base in the reaction shown here.



- a) HClO_2 b) H_2O c) H_3O^+ d) ClO_2^-

2. Which pair is a Brønsted–Lowry conjugate acid–base pair?

- a) NH_3 ; NH_4^+
 b) H_3O^+ ; OH^-
 c) HCl ; HBr
 d) ClO_4^- ; ClO_3^-

3. Which acid has the largest K_a : $\text{HClO}_2(aq)$, $\text{HBrO}_2(aq)$, or $\text{HIO}_2(aq)$?

- a) $\text{HClO}_2(aq)$
 b) $\text{HBrO}_2(aq)$
 c) $\text{HIO}_2(aq)$
 d) All three acids have the same K_a .

4. Consider the given acid ionization constants and identify the strongest conjugate base.

Acid	K_a
$\text{HNO}_2(aq)$	4.6×10^{-4}
$\text{HCHO}_2(aq)$	1.8×10^{-4}
$\text{HClO}(aq)$	2.9×10^{-8}
$\text{HCN}(aq)$	4.9×10^{-10}

- a) $\text{NO}_2^-(aq)$
 b) $\text{CHO}_2^-(aq)$
 c) $\text{ClO}^-(aq)$
 d) $\text{CN}^-(aq)$

5. What is the OH^- concentration in an aqueous solution at 25°C in which $[\text{H}_3\text{O}^+] = 1.9 \times 10^{-9} \text{ M}$?

- a) $1.9 \times 10^{-9} \text{ M}$
 b) $5.3 \times 10^{-6} \text{ M}$
 c) $5.3 \times 10^{+6} \text{ M}$
 d) $1.9 \times 10^{-23} \text{ M}$

6. An $\text{HNO}_3(aq)$ solution has a pH of 1.75. What is the molar concentration of the $\text{HNO}_3(aq)$ solution?

- a) 1.75 M b) $5.6 \times 10^{-13} \text{ M}$
 c) 56 M d) 0.018 M

7. Find the pH of a 0.350 M aqueous benzoic acid solution. For benzoic acid, $K_a = 6.5 \times 10^{-5}$.

- a) 4.64 b) 4.19
 c) 2.32 d) 11.68

8. Find the pH of a 0.155 M $\text{HClO}_2(aq)$ solution. For HClO_2 , $K_a = 0.011$.

- a) 0.92 b) 1.44
 c) 1.39 d) 0.69

9. Calculate the percent ionization of 1.45 M aqueous acetic acid solution. For acetic acid, $K_a = 1.8 \times 10^{-5}$.

- a) 0.35% b) 0.0018%
 c) 0.29% d) 0.0051%

10. Consider two aqueous solutions of nitrous acid (HNO_2). Solution A has a concentration of $[\text{HNO}_2] = 0.55 \text{ M}$, and solution B has a concentration of $[\text{HNO}_2] = 1.25 \text{ M}$. Which statement about the two solutions is true?

- a) Solution A has the higher percent ionization and the higher pH.
 b) Solution B has the higher percent ionization and the higher pH.
 c) Solution A has the higher percent ionization and solution B has the higher pH.
 d) Solution B has the higher percent ionization and solution A has the higher pH.

11. What is the $[\text{OH}^-]$ in a 0.200 M solution of ethylamine ($\text{C}_2\text{H}_5\text{NH}_2$)? For ethylamine, $K_b = 5.6 \times 10^{-4}$.

- a) 11.52 M
 b) 2.48 M
 c) 0.033 M
 d) 0.011 M

12. Which ion will be basic in aqueous solution?

- a) Br^- b) NO_3^-
 c) HSO_4^- d) SO_3^{2-}

13. Which compound will form an acidic solution when dissolved in water?

- a) NH_4Cl b) NaCl
 c) KNO_2 d) $\text{Ca}(\text{NO}_3)_2$

14. Find the pH of 0.175 M NaCN solution. For HCN , $K_a = 4.9 \times 10^{-10}$.

- a) 5.03 b) 11.28
 c) 2.31 d) 8.97

15. What is the concentration of X^{2-} in a 0.150 M solution of the diprotic acid H_2X ? For H_2X , $K_{a1} = 4.5 \times 10^{-6}$ and $K_{a2} = 1.2 \times 10^{-11}$.

- a) $9.9 \times 10^{-8} \text{ M}$
 b) $2.0 \times 10^{-9} \text{ M}$
 c) $8.2 \times 10^{-4} \text{ M}$
 d) $1.2 \times 10^{-11} \text{ M}$

Answers: 1. d; 2. a; 3. a; 4. d; 5. b; 6. d; 7. c; 8. b; 9. a; 10. a; 11. d; 12. d; 13. a; 14. b; 15. d

CHAPTER SUMMARY 16

REVIEW

MasteringChemistry™ provides end-of-chapter exercises, feedback-enriched tutorial problems, animations, and interactive activities to encourage problem solving practice and deeper understanding of key concepts and topics.

KEY LEARNING OUTCOMES

CHAPTER OBJECTIVES	ASSESSMENT
Identify Brønsted–Lowry Acids and Bases and Their Conjugates (16.3)	• Example 16.1 For Practice 16.1 Exercises 33, 34
Determine Relative Acid Strength from Molecular Structure (16.4)	• Exercises 39–42
Use K_w in Calculations (16.6)	• Example 16.2 For Practice 16.2 Exercises 49, 50
Calculate pH from $[H_3O^+]$ or $[OH^-]$ (16.6)	• Examples 16.3, 16.4 For Practice 16.3, 16.4 Exercises 51–54
Find the pH of a Weak Acid Solution (16.7)	• Examples 16.5, 16.6, 16.7 For Practice 16.5, 16.6, 16.7 Exercises 65–70
Find the Acid Ionization Constant from pH (16.7)	• Example 16.8 For Practice 16.8 Exercises 71, 72
Find the Percent Ionization of a Weak Acid (16.7)	• Example 16.9 For Practice 16.9 Exercises 73–76
Find the pH in Mixtures of Weak Acids (16.7)	• Example 16.10 For Practice 16.10 Exercises 81, 82
Find the $[OH^-]$ and pH of a Strong Base Solution (16.8)	• Example 16.11 For Practice 16.11 Exercises 83, 84
Find the $[OH^-]$ and pH of a Weak Base Solution (16.8)	• Example 16.12 For Practice 16.12 Exercises 91, 92
Determine Whether an Anion Is Basic or Neutral (16.9)	• Example 16.13 For Practice 16.13 Exercises 97, 98
Determine the pH of a Solution Containing an Anion Acting as a Base (16.9)	• Example 16.14 For Practice 16.14 Exercises 99, 100
Determine Whether a Cation Is Acidic or Neutral (16.9)	• Example 16.15 For Practice 16.15 Exercises 101, 102
Determine the Overall Acidity or Basicity of Salt Solutions (16.9)	• Example 16.16 For Practice 16.16 Exercises 103, 104
Find the pH of a Polyprotic Acid Solution (16.10)	• Example 16.17 For Practice 16.17 Exercises 115, 116
Find the $[H_3O^+]$ in Dilute H_2SO_4 Solutions (16.10)	• Example 16.18 For Practice 16.18 Exercise 119
Find the Concentration of the Anions for a Weak Diprotic Acid Solution (16.10)	• Example 16.19 For Practice 16.19 Exercises 117, 118

KEY TERMS

Section 16.2

carboxylic acid (687)
alkaloid (688)

Section 16.3

Arrhenius definitions (of acids and bases) (688)
hydronium ion (688)
strong acid (688)
weak acid (688)
strong base (689)
weak base (689)

Brønsted–Lowry definitions (of acids and bases) (689)
amphoteric (689)
conjugate acid–base pair (690)
conjugate acid (690)
conjugate base (690)

Section 16.5

monoprotic acid (693)
diprotic acid (693)
triprotic acid (694)
acid ionization constant (K_a) (694)

Section 16.6

autoionization (696)
ion product constant for water (K_w) (696)
neutral (696)
acidic solution (696)
basic solution (697)
pH (698)

Section 16.7

percent ionization (706)

Section 16.8

base ionization constant (K_b) (710)

Section 16.10

polyprotic acid (720)

Section 16.11

Lewis acid (725)
Lewis base (725)

KEY CONCEPTS

The Nature of Acids and Bases (16.2)

- Acids generally taste sour, dissolve metals, turn blue litmus paper red, and neutralize bases. Common acids are hydrochloric, sulfuric, nitric, and carboxylic acids.
- Bases generally taste bitter, feel slippery, turn red litmus paper blue, and neutralize acids. Common bases are sodium hydroxide, sodium bicarbonate, and potassium hydroxide.

Definitions of Acids and Bases (16.3)

- The Arrhenius definition of acids and bases states that in an aqueous solution, an acid produces hydrogen ions and a base produces hydroxide ions.
- The Brønsted–Lowry definition of acids and bases states that an acid is a proton (hydrogen ion) donor and a base is a proton acceptor. According to the Brønsted–Lowry definition, two substances related by the transfer of a proton are a conjugate acid–base pair.

Acid Strength and Molecular Structure (16.4)

- For binary acids, acid strength decreases with increasing bond energy and increases with increasing bond polarity.
- For oxyacids, acid strength increases with the electronegativity of the atoms bonded to the oxygen atom and also increases with the number of oxygen atoms in the molecule.

Acid Strength and the Acid Dissociation Constant (K_a) (16.5)

- In a solution, a strong acid completely ionizes, but a weak acid only partially ionizes.
- The extent of dissociation of a weak acid is quantified by the acid dissociation constant, K_a , which is the equilibrium constant for the ionization of the weak acid.

Autoionization of Water and pH (16.6)

- In an acidic solution, the concentration of hydrogen ions is always greater than the concentration of hydroxide ions. $[\text{H}_3\text{O}^+]$ multiplied by $[\text{OH}^-]$ is always constant at a constant temperature.
- There are two types of logarithmic acid–base scales: pH and pOH. At 25 °C, the sum of the pH and pOH is always 14.

Finding the $[\text{H}_3\text{O}^+]$ and pH of Strong and Weak Acid Solutions (16.7)

- In a strong acid solution, the hydrogen ion concentration equals the initial concentration of the acid.

- In a weak acid solution, the hydrogen ion concentration—which can be determined by solving an equilibrium problem—is lower than the initial acid concentration.
- The percent ionization of weak acids decreases as the acid (and hydrogen ion) concentration increases.
- In mixtures of two acids with large K_a differences, the concentration of hydrogen ions can usually be determined by considering only the stronger of the two acids.

Finding the $[\text{OH}^-]$ and pH of Strong and Weak Base Solutions (16.8)

- A strong base dissociates completely; a weak base does not.
- Most weak bases produce hydroxide ions through the ionization of water. The base ionization constant, K_b , indicates the extent of ionization.

The Acid–Base Properties of Ions and Salts (16.9)

- An anion is a weak base if it is the conjugate base of a weak acid; it is neutral if it is the conjugate base of a strong acid.
- A cation is a weak acid if it is the conjugate acid of a weak base; it is neutral if it is the conjugate acid of a strong base.
- To calculate the pH of an acidic cation or basic anion, we determine K_a or K_b from the equation $K_a \times K_b = K_w$.

Polyprotic Acids (16.10)

- Polyprotic acids contain two or more ionizable protons.
- Generally, polyprotic acids ionize in successive steps, with the value of K_a becoming smaller for each step.
- In many cases, we can determine the $[\text{H}_3\text{O}^+]$ of a polyprotic acid solution by considering only the first ionization step; then, the concentration of the acid anion formed in the second ionization step is equivalent to the value of K_{a_2} .

Lewis Acids and Bases (16.11)

- A third model of acids and bases, the Lewis model, defines a base as an electron pair donor and an acid as an electron pair acceptor; therefore, according to this definition, an acid does not have to contain hydrogen. According to this definition, an acid can be a compound with an empty orbital—or one that will rearrange to make an empty orbital—or a cation.

KEY EQUATIONS AND RELATIONSHIPS

Note: In all of these equations, $[\text{H}^+]$ is interchangeable with $[\text{H}_3\text{O}^+]$.

Expression for the Acid Ionization Constant, K_a (16.5)

$$K_a = \frac{[\text{H}_3\text{O}^+][\text{A}^-]}{[\text{HA}]}$$

The Ion Product Constant for Water, K_w (16.6)

$$K_w = [\text{H}_3\text{O}^+][\text{OH}^-] = 1.0 \times 10^{-14} \text{ (at 25 °C)}$$

Expression for the pH Scale (16.6)

$$\text{pH} = -\log[\text{H}_3\text{O}^+]$$

Expression for the pOH Scale (16.6)

$$\text{pOH} = -\log[\text{OH}^-]$$

Relationship between pH and pOH (16.6)

$$\text{pH} + \text{pOH} = 14.00$$

Expression for the $\text{p}K_a$ Scale (16.6)

$$\text{p}K_a = -\log K_a$$

Expression for Percent Ionization (16.7)

$$\begin{aligned} \text{percent ionization} &= \frac{\text{concentration of ionized acid}}{\text{initial concentration of acid}} \times 100\% \\ &= \frac{[\text{H}_3\text{O}^+]_{\text{equil}}}{[\text{HA}]_{\text{init}}} \times 100\% \end{aligned}$$

Relationship between K_a , K_b , and K_w (16.9)

$$K_a \times K_b = K_w$$

EXERCISES

REVIEW QUESTIONS

1. In the opening section of this chapter text, we see that in the Batman comic book series, Batman treats a strong acid burn with a strong base. What is problematic about this treatment?
2. What are the general physical and chemical properties of acids? Of bases?
3. What is a carboxylic acid? Give an example.
4. What is the Arrhenius definition of an acid? Of a base?
5. What is a hydronium ion? Does H^+ exist in solution by itself?
6. What is the Brønsted–Lowry definition of an acid? Of a base?
7. Why is there more than one definition of acid–base behavior? Which definition is the right one?
8. Describe amphoteric behavior and give an example.
9. What is a conjugate acid–base pair? Provide an example.
10. Explain the difference between a strong acid and a weak acid and list one example of each.
11. For a binary acid, $\text{H}—\text{Y}$, which factors affect the relative ease with which the acid ionizes?
12. Which factors affect the relative acidity of an oxyacid?
13. What are diprotic and triprotic acids? List an example of each.
14. Define the acid ionization constant and explain its significance.
15. Write an equation for the autoionization of water and an expression for the ion product constant for water (K_w). What is the value of K_w at 25°C ?
16. What happens to the $[\text{OH}^-]$ of a solution when the $[\text{H}_3\text{O}^+]$ is increased? Decreased?
17. Define pH. What pH range is considered acidic? Basic? Neutral?
18. Define pOH. What pOH range is considered acidic? Basic? Neutral?
19. In most solutions containing a strong or weak acid, the autoionization of water can be neglected when calculating $[\text{H}_3\text{O}^+]$. Explain why this statement is valid.
20. When calculating $[\text{H}_3\text{O}^+]$ for weak acid solutions, we can often use the x is small approximation. Explain the nature of this approximation and why it is valid.
21. What is the percent ionization of an acid? Explain what happens to the percent ionization of a weak acid as a function of the concentration of the weak acid solution.
22. In calculating $[\text{H}_3\text{O}^+]$ for a mixture of a strong acid and weak acid, the weak acid can often be neglected. Explain why this statement is valid.
23. Write a generic equation showing how a weak base ionizes water.
24. How can you determine if an anion will act as a weak base? Write a generic equation showing the reaction by which an anion, A^- , acts as a weak base.
25. What is the relationship between the acid ionization constant for a weak acid (K_a) and the base ionization constant for its conjugate base (K_b)?
26. What kinds of cations act as weak acids? List some examples.
27. When calculating the $[\text{H}_3\text{O}^+]$ for a polyprotic acid, the second ionization step can often be neglected. Explain why this statement is valid.
28. For a weak diprotic acid H_2X , what is the relationship between $[\text{X}^{2-}]$ and K_{a2} ? Under what conditions does this relationship exist?
29. What is the Lewis definition of an acid? Of a base?
30. What is a general characteristic of a Lewis acid? Of a Lewis base?

PROBLEMS BY TOPIC

Note: Answers to all odd-numbered Problems, numbered in blue, can be found in Appendix III. Exercises in the Problems by Topic section are paired, with each odd-numbered problem followed by a similar even-numbered problem. Exercises in the Cumulative Problems section are also paired but more loosely. Because of their nature, Challenge Problems and Conceptual Problems are unpaired.

The Nature and Definitions of Acids and Base

31. Identify each substance as an acid or a base and write a chemical equation showing how it is an acid or a base according to the Arrhenius definition.
 - a. $\text{HNO}_3(\text{aq})$
 - b. $\text{NH}_4^+(\text{aq})$
 - c. $\text{KOH}(\text{aq})$
 - d. $\text{HC}_2\text{H}_3\text{O}_2(\text{aq})$
32. Identify each substance as an acid or a base and write a chemical equation showing how it is an acid or a base according to the Arrhenius definition.
 - a. $\text{NaOH}(\text{aq})$
 - b. $\text{H}_2\text{SO}_4(\text{aq})$
 - c. $\text{HBr}(\text{aq})$
 - d. $\text{Sr}(\text{OH})_2(\text{aq})$
33. In each reaction, identify the Brønsted–Lowry acid, the Brønsted–Lowry base, the conjugate acid, and the conjugate base.
 - a. $\text{H}_2\text{CO}_3(\text{aq}) + \text{H}_2\text{O}(\text{l}) \rightleftharpoons \text{H}_3\text{O}^+(\text{aq}) + \text{HCO}_3^-(\text{aq})$
 - b. $\text{NH}_3(\text{aq}) + \text{H}_2\text{O}(\text{l}) \rightleftharpoons \text{NH}_4^+(\text{aq}) + \text{OH}^-(\text{aq})$
 - c. $\text{HNO}_3(\text{aq}) + \text{H}_2\text{O}(\text{l}) \longrightarrow \text{H}_3\text{O}^+(\text{aq}) + \text{NO}_3^-(\text{aq})$
 - d. $\text{C}_5\text{H}_5\text{N}(\text{aq}) + \text{H}_2\text{O}(\text{l}) \rightleftharpoons \text{C}_5\text{H}_5\text{NH}^+(\text{aq}) + \text{OH}^-(\text{aq})$
34. In each reaction, identify the Brønsted–Lowry acid, the Brønsted–Lowry base, the conjugate acid, and the conjugate base.
 - a. $\text{HI}(\text{aq}) + \text{H}_2\text{O}(\text{l}) \longrightarrow \text{H}_3\text{O}^+(\text{aq}) + \text{I}^-(\text{aq})$
 - b. $\text{CH}_3\text{NH}_2(\text{aq}) + \text{H}_2\text{O}(\text{l}) \rightleftharpoons \text{CH}_3\text{NH}_3^+(\text{aq}) + \text{OH}^-(\text{aq})$
 - c. $\text{CO}_3^{2-}(\text{aq}) + \text{H}_2\text{O}(\text{l}) \rightleftharpoons \text{HCO}_3^-(\text{aq}) + \text{OH}^-(\text{aq})$
 - d. $\text{HBr}(\text{aq}) + \text{H}_2\text{O}(\text{l}) \longrightarrow \text{H}_3\text{O}^+(\text{aq}) + \text{Br}^-(\text{aq})$
35. Write the formula for the conjugate base of each acid.
 - a. HCl
 - b. H_2SO_3
 - c. HCHO_2
 - d. HF
36. Write the formula for the conjugate acid of each base.
 - a. NH_3
 - b. ClO_4^-
 - c. HSO_4^-
 - d. CO_3^{2-}
37. Both H_2O and H_2PO_4^- are amphoteric. Write an equation to show how each substance can act as an acid, and another equation to show how each can act as a base.
38. Both HCO_3^- and HS^- are amphoteric. Write an equation to show how each substance can act as an acid, and another equation to show how each can act as a base.

Acid Strength and Molecular Structure

39. Based on their molecular structure, pick the stronger acid from each pair of binary acids. Explain your choice.
- HF and HCl
 - H₂O or HF
 - H₂Se or H₂S
40. Based on molecular structure, arrange the binary compounds in order of increasing acid strength. Explain your choice.



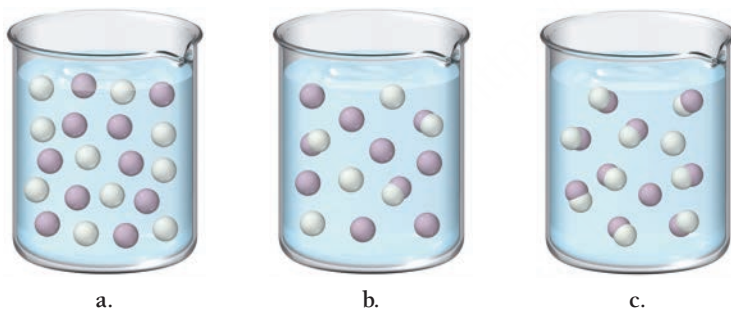
41. Based on their molecular structure, pick the stronger acid from each pair of oxyacids. Explain your choice.
- H₂SO₄ or H₂SO₃
 - HClO₂ or HClO
 - HClO or HBrO
 - CCl₃COOH or CH₃COOH
42. Based on molecular structure, arrange the oxyacids in order of increasing acid strength. Explain your choice.



43. Which is a stronger base, S²⁻ or Se²⁻? Explain.
44. Which is a stronger base, PO₄³⁻ or AsO₄³⁻? Explain.

Acid Strength and K_a

45. Classify each acid as strong or weak. If the acid is weak, write an expression for the acid ionization constant (K_a).
- HNO₃
 - HCl
 - HBr
 - H₂SO₃
46. Classify each acid as strong or weak. If the acid is weak, write an expression for the acid ionization constant (K_a).
- HF
 - HCHO₂
 - H₂SO₄
 - H₂CO₃
47. The three diagrams represent three different solutions of the binary acid HA. Water molecules have been omitted for clarity, and hydronium ions (H₃O⁺) are represented by hydrogen ions (H⁺). Rank the acids in order of decreasing acid strength.



48. Rank the solutions in order of decreasing [H₃O⁺]: 0.10 M HCl; 0.10 M HF; 0.10 M HClO; 0.10 M HC₆H₅O.

Autoionization of Water and pH

49. Calculate [OH⁻] in each aqueous solution at 25°C, and classify the solution as acidic or basic.
- [H₃O⁺] = 1.2 × 10⁻⁸ M
 - [H₃O⁺] = 8.5 × 10⁻⁵ M
 - [H₃O⁺] = 3.5 × 10⁻² M
50. Calculate [H₃O⁺] in each aqueous solution at 25°C, and classify each solution as acidic or basic.
- [OH⁻] = 1.1 × 10⁻⁹ M
 - [OH⁻] = 2.9 × 10⁻² M
 - [OH⁻] = 6.9 × 10⁻¹² M

51. Calculate the pH and pOH of each solution.
- [H₃O⁺] = 1.7 × 10⁻⁸ M
 - [H₃O⁺] = 1.0 × 10⁻⁷ M
 - [H₃O⁺] = 2.2 × 10⁻⁶ M
52. Calculate [H₃O⁺] and [OH⁻] for each solution.
- pH = 8.55
 - pH = 11.23
 - pH = 2.87
53. Complete the table. (All solutions are at 25°C.)

[H ₃ O ⁺]	[OH ⁻]	pH	Acidic or Basic
_____	_____	3.15	_____
3.7 × 10 ⁻⁹ M	_____	_____	_____
_____	_____	11.1	_____
_____	1.6 × 10 ⁻¹¹ M	_____	_____

54. Complete the table. (All solutions are at 25°C.)

[H ₃ O ⁺]	[OH ⁻]	pH	Acidic or Basic
3.5 × 10 ⁻³ M	_____	_____	_____
_____	3.8 × 10 ⁻⁷ M	_____	_____
1.8 × 10 ⁻⁹ M	_____	_____	_____
_____	_____	7.15	_____

55. Like all equilibrium constants, the value of K_w depends on temperature. At body temperature (37°C), K_w = 2.4 × 10⁻¹⁴. What are the [H₃O⁺] and pH of pure water at body temperature?
56. The value of K_w increases with increasing temperature. Is the autoionization of water endothermic or exothermic?
57. Calculate the pH of each acid solution. Explain how the pH values you calculate demonstrate that the pH of an acid solution should carry as many digits to the right of the decimal place as the number of significant figures in the concentration of the solution.

$$\text{H}_3\text{O}^+ = 0.044 \text{ M}$$

$$\text{H}_3\text{O}^+ = 0.045 \text{ M}$$

$$\text{H}_3\text{O}^+ = 0.046 \text{ M}$$

58. Find the concentration of H₃O⁺, to the correct number of significant figures, in a solution with each pH. Describe how your calculations show the relationship between the number of digits to the right of the decimal place in pH and the number of significant figures in concentration.

$$\text{pH} = 2.50$$

$$\text{pH} = 2.51$$

$$\text{pH} = 2.52$$

Acid Solutions

59. For each strong acid solution, determine [H₃O⁺], [OH⁻], and pH.
- 0.25 M HCl
 - 0.015 M HNO₃
 - a solution that is 0.052 M in HBr and 0.020 M in HNO₃
 - a solution that is 0.655% HNO₃ by mass (Assume a density of 1.01 g/mL for the solution.)

60. Determine the pH of each solution.
- 0.048 M HI
 - 0.0895 M HClO_4
 - a solution that is 0.045 M in HClO_4 and 0.048 M in HCl
 - a solution that is 1.09% HCl by mass (Assume a density of 1.01 g/mL for the solution.)
61. What mass of HI should be present in 0.250 L of solution to obtain a solution with each pH value?
- pH = 1.25
 - pH = 1.75
 - pH = 2.85
62. What mass of HClO_4 should be present in 0.500 L of solution to obtain a solution with each pH value?
- pH = 2.50
 - pH = 1.50
 - pH = 0.50
63. What is the pH of a solution in which 224 mL of HCl(g) , measured at 27.2°C and 1.02 atm, is dissolved in 1.5 L of aqueous solution? (Hint: Use the ideal gas law to find moles of HCl first.)
64. What volume of a concentrated HCl solution, which is 36.0% HCl by mass and has a density of 1.179 g/mL, should you use to make 5.00 L of an HCl solution with a pH of 1.8?
65. Determine the $[\text{H}_3\text{O}^+]$ and pH of a 0.100 M solution of benzoic acid.
66. Determine the $[\text{H}_3\text{O}^+]$ and pH of a 0.200 M solution of formic acid.
67. Determine the pH of an HNO_2 solution of each concentration. In which cases can you *not* make the assumption that x is *small*?
- 0.500 M
 - 0.100 M
 - 0.0100 M
68. Determine the pH of an HF solution of each concentration. In which cases can you *not* make the assumption that x is *small*?
- 0.250 M
 - 0.0500 M
 - 0.0250 M
69. If 15.0 mL of glacial acetic acid (pure $\text{HC}_2\text{H}_3\text{O}_2$) is diluted to 1.50 L with water, what is the pH of the resulting solution? The density of glacial acetic acid is 1.05 g/mL.
70. Calculate the pH of a formic acid solution that contains 1.35% formic acid by mass. (Assume a density 1.01 g/mL for the solution.)
71. A 0.185 M solution of a weak acid (HA) has a pH of 2.95. Calculate the acid ionization constant (K_a) for the acid.
72. A 0.115 M solution of a weak acid (HA) has a pH of 3.29. Calculate the acid ionization constant (K_a) for the acid.
73. Determine the percent ionization of a 0.125 M HCN solution.
74. Determine the percent ionization of a 0.225 M solution of benzoic acid.
75. Calculate the percent ionization of an acetic acid solution having the given concentrations.
- | | |
|------------|-------------|
| a. 1.00 M | b. 0.500 M |
| c. 0.100 M | d. 0.0500 M |
76. Calculate the percent ionization of a formic acid solution having the given concentrations.
- | | |
|------------|-------------|
| a. 1.00 M | b. 0.500 M |
| c. 0.100 M | d. 0.0500 M |
77. A 0.148 M solution of a monoprotic acid has a percent ionization of 1.55%. Determine the acid ionization constant (K_a) for the acid.
78. A 0.085 M solution of a monoprotic acid has a percent ionization of 0.59%. Determine the acid ionization constant (K_a) for the acid.
79. Find the pH and percent ionization of each HF solution. (K_a for HF is 6.8×10^{-4} .)
- 0.250 M HF
 - 0.100 M HF
 - 0.050 M HF
80. Find the pH and percent ionization of a 0.100 M solution of a weak monoprotic acid having the given K_a values.
- $K_a = 1.0 \times 10^{-5}$
 - $K_a = 1.0 \times 10^{-3}$
 - $K_a = 1.0 \times 10^{-1}$
81. Find the pH of each mixture of acids.
- 0.115 M in HBr and 0.125 M in HCHO_2
 - 0.150 M in HNO_2 and 0.085 M in HNO_3
 - 0.185 M in HCHO_2 and 0.225 M in $\text{HC}_2\text{H}_3\text{O}_2$
 - 0.050 M in acetic acid and 0.050 M in hydrocyanic acid
82. Find the pH of each mixture of acids.
- 0.075 M in HNO_3 and 0.175 M in $\text{HC}_7\text{H}_5\text{O}_2$
 - 0.020 M in HBr and 0.015 M in HClO_4
 - 0.095 M in HF and 0.225 M in $\text{HC}_6\text{H}_5\text{O}$
 - 0.100 M in formic acid and 0.050 M in hypochlorous acid

Base Solutions

83. For each strong base solution, determine $[\text{OH}^-]$, $[\text{H}_3\text{O}^+]$, pH, and pOH.
- 0.15 M NaOH
 - 1.5×10^{-3} M Ca(OH)_2
 - 4.8×10^{-4} M Sr(OH)_2
 - 8.7×10^{-5} M KOH
84. For each strong base solution, determine $[\text{OH}^-]$, $[\text{H}_3\text{O}^+]$, and pOH.
- 8.77×10^{-3} M LiOH
 - 0.0112 M Ba(OH)_2
 - 1.9×10^{-4} M KOH
 - 5.0×10^{-4} M Ca(OH)_2
85. Determine the pH of a solution that is 3.85% KOH by mass. Assume that the solution has density of 1.01 g/mL.
86. Determine the pH of a solution that is 1.55% NaOH by mass. Assume that the solution has density of 1.01 g/mL.
87. What volume of 0.855 M KOH solution do you need to make 3.55 L of a solution with pH of 12.4?
88. What volume of a 15.0% by mass NaOH solution, which has a density of 1.116 g/mL, should you use to make 5.00 L of an NaOH solution with a pH of 10.8?
89. Write equations showing how each weak base ionizes water to form OH^- . Also write the corresponding expression for K_b .
- NH_3
 - HCO_3^-
 - CH_3NH_2
90. Write equations showing how each weak base ionizes water to form OH^- . Also write the corresponding expression for K_b .
- CO_3^{2-}
 - $\text{C}_6\text{H}_5\text{NH}_2$
 - $\text{C}_2\text{H}_5\text{NH}_2$

91. Determine the $[\text{OH}^-]$, pH, and pOH of a 0.15 M ammonia solution.
92. Determine the $[\text{OH}^-]$, pH, and pOH of a solution that is 0.125 M in CO_3^{2-} .
93. Caffeine ($\text{C}_8\text{H}_{10}\text{N}_4\text{O}_2$) is a weak base with a pK_b of 10.4. Calculate the pH of a solution containing a caffeine concentration of 455 mg/L.
94. Amphetamine ($\text{C}_9\text{H}_{13}\text{N}$) is a weak base with a pK_b of 4.2. Calculate the pH of a solution containing an amphetamine concentration of 225 mg/L.
95. Morphine is a weak base. A 0.150 M solution of morphine has a pH of 10.5. What is K_b for morphine?
96. A 0.135 M solution of a weak base has a pH of 11.23. Determine K_b for the base.

Acid-Base Properties of Ions and Salts

97. Determine if each anion acts as a weak base in solution. For the anions that are basic, write an equation that shows how the anion acts as a base.
 - a. Br^-
 - b. ClO^-
 - c. CN^-
 - d. Cl^-
98. Determine whether each anion is basic or neutral. For the anions that are basic, write an equation that shows how the anion acts as a base.
 - a. $\text{C}_7\text{H}_5\text{O}_2^-$
 - b. I^-
 - c. NO_3^-
 - d. F^-
99. Determine the $[\text{OH}^-]$ and pH of a solution that is 0.140 M in F^- .
100. Determine the $[\text{OH}^-]$ and pH of a solution that is 0.250 M in HCO_3^- .
101. Determine whether each cation is acidic or pH-neutral. For the cations that are acidic, write an equation that shows how the cation acts as an acid.
 - a. NH_4^+
 - b. Na^+
 - c. Co^{3+}
 - d. CH_3NH_3^+
102. Determine whether each cation is acidic or pH-neutral. For the cations that are acidic, write an equation that shows how the cation acts as an acid.
 - a. Sr^{2+}
 - b. Mn^{3+}
 - c. $\text{C}_5\text{H}_5\text{NH}^+$
 - d. Li^+
103. Determine if each salt will form a solution that is acidic, basic, or pH-neutral.
 - a. FeCl_3
 - b. NaF
 - c. CaBr_2
 - d. NH_4Br
 - e. $\text{C}_6\text{H}_5\text{NH}_3\text{NO}_2$
104. Determine if each salt will form a solution that is acidic, basic, or pH-neutral.
 - a. $\text{Al}(\text{NO}_3)_3$
 - b. $\text{C}_2\text{H}_5\text{NH}_3\text{NO}_3$
 - c. K_2CO_3
 - d. RbI
 - e. NH_4ClO
105. Arrange the solutions in order of increasing acidity.

NaCl , NH_4Cl , NaHCO_3 , NH_4ClO_2 , NaOH
106. Arrange the solutions in order of increasing basicity.

$\text{CH}_3\text{NH}_3\text{Br}$, KOH , KBr , KCN , $\text{C}_5\text{H}_5\text{NHNO}_2$
107. Determine the pH of each solution.
 - a. 0.10 M NH_4Cl
 - b. 0.10 M $\text{NaC}_2\text{H}_3\text{O}_2$
 - c. 0.10 M NaCl
108. Determine the pH of each solution.
 - a. 0.20 M KCHO_2
 - b. 0.20 M $\text{CH}_3\text{NH}_3\text{I}$
 - c. 0.20 M KI
109. Calculate the concentration of all species in a 0.15 M KF solution.
110. Calculate the concentration of all species in a 0.225 M $\text{C}_6\text{H}_5\text{NH}_3\text{Cl}$ solution.
111. Pick the stronger base from each pair.
 - a. F^- or Cl^-
 - b. NO_2^- or NO_3^-
 - c. F^- or ClO^-
112. Pick the stronger base from each pair.
 - a. ClO_4^- or ClO_2^-
 - b. Cl^- or H_2O
 - c. CN^- or ClO^-

Polyprotic Acids

113. Write chemical equations and corresponding equilibrium expressions for each of the three ionization steps of phosphoric acid.
114. Write chemical equations and corresponding equilibrium expressions for each of the two ionization steps of carbonic acid.
115. Calculate the $[\text{H}_3\text{O}^+]$ and pH of each polyprotic acid solution.
 - a. 0.350 M H_3PO_4
 - b. 0.350 M $\text{H}_2\text{C}_2\text{O}_4$
116. Calculate the $[\text{H}_3\text{O}^+]$ and pH of each polyprotic acid solution.
 - a. 0.125 M H_2CO_3
 - b. 0.125 M $\text{H}_3\text{C}_6\text{H}_5\text{O}_7$
117. Calculate the concentration of each species in a 0.500 M solution of H_2SO_3 .
118. Calculate the concentration of each species in a 0.155 M solution of H_2CO_3 .
119. Calculate the $[\text{H}_3\text{O}^+]$ and pH of each H_2SO_4 solution. At approximately what concentration does the x is *small* approximation break down?
 - a. 0.50 M
 - b. 0.10 M
 - c. 0.050 M
120. Consider a 0.10 M solution of a weak polyprotic acid (H_2A) with the possible values of K_{a1} and K_{a2} given here.
 - a. $K_{a1} = 1.0 \times 10^{-4}$; $K_{a2} = 5.0 \times 10^{-5}$
 - b. $K_{a1} = 1.0 \times 10^{-4}$; $K_{a2} = 1.0 \times 10^{-5}$
 - c. $K_{a1} = 1.0 \times 10^{-4}$; $K_{a2} = 1.0 \times 10^{-6}$

Calculate the contributions to $[\text{H}_3\text{O}^+]$ from each ionization step. At what point can the contribution of the second step be neglected?

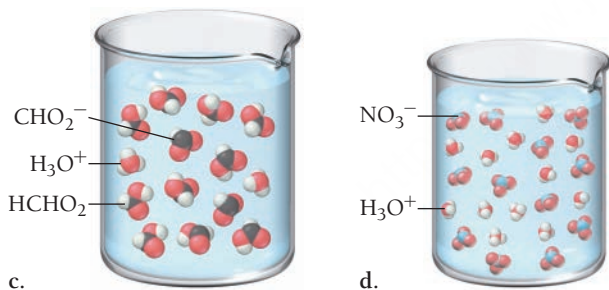
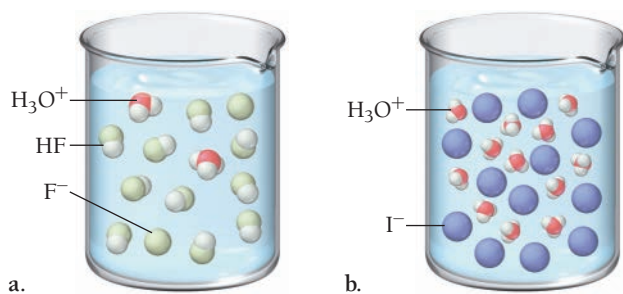
Lewis Acids and Bases

121. Classify each species as a Lewis acid or a Lewis base.
- Fe^{3+}
 - BH_3
 - NH_3
 - F^-
122. Classify each species as a Lewis acid or a Lewis base.
- BeCl_2
 - OH^-
 - $\text{B}(\text{OH})_3$
 - CN^-

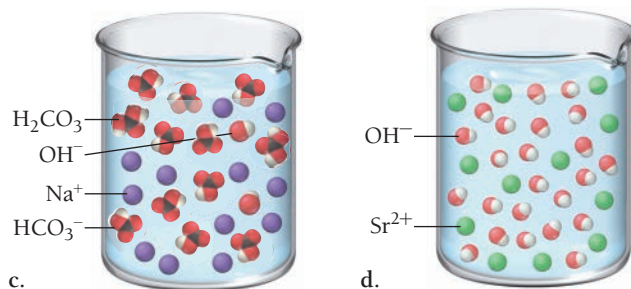
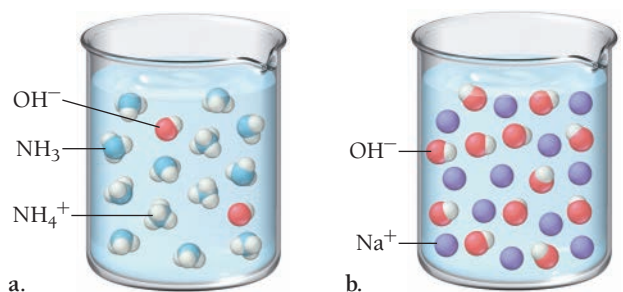
123. Identify the Lewis acid and Lewis base among the reactants in each equation.
- $\text{Fe}^{3+}(\text{aq}) + 6 \text{H}_2\text{O}(\text{l}) \rightleftharpoons \text{Fe}(\text{H}_2\text{O})_6^{3+}(\text{aq})$
 - $\text{Zn}^{2+}(\text{aq}) + 4 \text{NH}_3(\text{aq}) \rightleftharpoons \text{Zn}(\text{NH}_3)_4^{2+}(\text{aq})$
 - $(\text{CH}_3)_3\text{N}(\text{g}) + \text{BF}_3(\text{g}) \rightleftharpoons (\text{CH}_3)_3\text{NBF}_3(\text{s})$
124. Identify the Lewis acid and Lewis base among the reactants in each equation.
- $\text{Ag}^+(\text{aq}) + 2 \text{NH}_3(\text{aq}) \rightleftharpoons \text{Ag}(\text{NH}_3)_2^+(\text{aq})$
 - $\text{AlBr}_3 + \text{NH}_3 \rightleftharpoons \text{H}_3\text{NAlBr}_3$
 - $\text{F}^-(\text{aq}) + \text{BF}_3(\text{aq}) \rightleftharpoons \text{BF}_4^-(\text{aq})$

CUMULATIVE PROBLEMS

125. Based on these molecular views, determine whether each pictured acid is weak or strong.



126. Based on these molecular views, determine whether each pictured base is weak or strong.

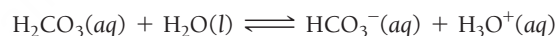
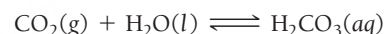


127. The binding of oxygen by hemoglobin in the blood involves the equilibrium reaction:



In this equation, Hb is hemoglobin. The pH of normal human blood is highly controlled within a range of 7.35 to 7.45. Given the above equilibrium, why is this important? What would happen to the oxygen-carrying capacity of hemoglobin if blood became too acidic (a dangerous condition known as acidosis)?

128. Carbon dioxide dissolves in water according to the equations:



Carbon dioxide levels in the atmosphere have increased about 20% over the last century. Given that Earth's oceans are exposed to atmospheric carbon dioxide, what effect might the increased CO_2 have on the pH of the world's oceans? What effect might this change have on the limestone structures (primarily CaCO_3) of coral reefs and marine shells?

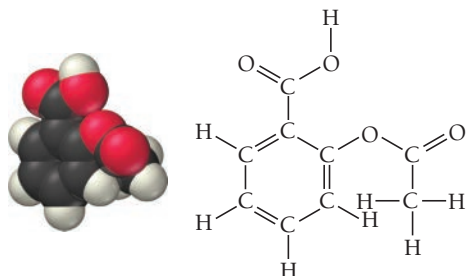
129. People often take Milk of Magnesia to reduce the discomfort associated with acid stomach or heartburn. The recommended dose is 1 teaspoon, which contains 4.00×10^2 mg of $\text{Mg}(\text{OH})_2$. What volume of an HCl solution with a pH of 1.3 can be neutralized by one dose of Milk of Magnesia? If the stomach contains 2.00×10^2 mL of pH 1.3 solution, will all the acid be neutralized? If not, what fraction is neutralized?
130. Lakes that have been acidified by acid rain (which is caused by air pollutants) can be neutralized by liming, the addition of limestone (CaCO_3). How much limestone (in kg) is required to completely neutralize a 4.3 billion liter lake with a pH of 5.5?



◀ Liming a lake.

131. Acid rain over the Great Lakes has a pH of about 4.5. Calculate the $[\text{H}_3\text{O}^+]$ of this rain and compare that value to the $[\text{H}_3\text{O}^+]$ of rain over the West Coast that has a pH of 5.4. How many times more concentrated is the acid in rain over the Great Lakes?

132. White wines tend to be more acidic than red wines. Find the $[\text{H}_3\text{O}^+]$ in a Sauvignon Blanc with a pH of 3.23 and a Cabernet Sauvignon with a pH of 3.64. How many times more acidic is the Sauvignon Blanc?
133. Common aspirin is acetylsalicylic acid, which has the structure shown here and a pK_a of 3.5.



Calculate the pH of a solution in which one normal adult dose of aspirin (6.5×10^2 mg) is dissolved in 8.0 ounces of water.

134. The AIDS drug zalcitabine (also known as ddC) is a weak base with a pK_b of 9.8. What percentage of the base is protonated (in the form BH^+) in an aqueous zalcitabine solution containing 565 mg/L?
135. Determine the pH of each solution.
- 0.0100 M HClO_4
 - 0.115 M HClO_2
 - 0.045 M $\text{Sr}(\text{OH})_2$
 - 0.0852 M KCN
 - 0.155 M NH_4Cl
136. Determine the pH of each solution.
- 0.0650 M HNO_3
 - 0.150 M HNO_2
 - 0.0195 M KOH
 - 0.245 M $\text{CH}_3\text{NH}_3\text{I}$
 - 0.318 M $\text{KC}_6\text{H}_5\text{O}$
137. Determine the pH of each two-component solution.
- 0.0550 M in HI and 0.00850 M in HF
 - 0.112 M in NaCl and 0.0953 M in KF
 - 0.132 M in NH_4Cl and 0.150 M HNO_3
 - 0.0887 M in sodium benzoate and 0.225 M in potassium bromide
 - 0.0450 M in HCl and 0.0225 M in HNO_3
138. Determine the pH of each two-component solution.
- 0.050 M KOH and 0.015 M $\text{Ba}(\text{OH})_2$
 - 0.265 M NH_4NO_3 and 0.102 M HCN
 - 0.075 M RbOH and 0.100 M NaHCO_3
 - 0.088 M HClO_4 and 0.022 M KOH
 - 0.115 M NaClO and 0.0500 M KI
139. Write net ionic equations for the reactions that take place when aqueous solutions of each pair of substances are mixed.
- sodium cyanide and nitric acid
 - ammonium chloride and sodium hydroxide
 - sodium cyanide and ammonium bromide
 - potassium hydrogen sulfate and lithium acetate
 - sodium hypochlorite and ammonia
140. Morphine has the formula $\text{C}_{17}\text{H}_{19}\text{NO}_3$. It is a base and accepts one proton per molecule. It is isolated from opium. A 0.682-g sample of opium is found to require 8.92 mL of a 0.0116 M solution of sulfuric acid for neutralization. Assuming that morphine is the only acid or base present in opium, calculate the percent morphine in the sample of opium.
141. The pH of a 1.00 M solution of urea, a weak organic base, is 7.050. Calculate the K_a of protonated urea (i.e., the conjugate acid of urea).
142. A solution is prepared by dissolving 0.10 mol of acetic acid and 0.10 mol of ammonium chloride in enough water to make 1.0 L of solution. Find the concentration of ammonia in the solution.
143. Lactic acid is a weak acid found in milk. Its calcium salt is a source of calcium for growing animals. A saturated solution of this salt, which we can represent as $\text{Ca}(\text{Lact})_2$, has a $[\text{Ca}^{2+}] = 0.26$ M and a pH = 8.40. Assuming the salt is completely dissociated, calculate the K_a of lactic acid.
144. A solution of 0.23 mol of the chloride salt of protonated quinine (QH^+), a weak organic base, in 1.0 L of solution has pH = 4.58. Find the K_b of quinine (Q).

CHALLENGE PROBLEMS

145. A student mistakenly calculates the pH of a 1.0×10^{-7} M HI solution to be 7.0. Explain why the student is incorrect and calculate the correct pH.
146. When 2.55 g of an unknown weak acid (HA) with a molar mass of 85.0 g/mol is dissolved in 250.0 g of water, the freezing point of the resulting solution is -0.257°C . Calculate K_a for the unknown weak acid.
147. Calculate the pH of a solution that is 0.00115 M in HCl and 0.0100 M in HClO_2 .
148. To what volume should you dilute 1 L of a solution of a weak acid HA to reduce the $[\text{H}^+]$ to one-half of that in the original solution?
149. HA, a weak acid, with $K_a = 1.0 \times 10^{-8}$, also forms the ion HA_2^- . The reaction is $\text{HA}(\text{aq}) + \text{A}^-(\text{aq}) \rightleftharpoons \text{HA}_2^-(\text{aq})$ and its $K_a = 4.0$. Calculate the $[\text{H}^+]$, $[\text{A}^-]$, and $[\text{HA}_2^-]$ in a 1.0 M solution of HA.
150. Basicity in the gas phase can be defined as the proton affinity of the base, for example, $\text{CH}_3\text{NH}_2(\text{g}) + \text{H}^+(\text{g}) \rightleftharpoons \text{CH}_3\text{NH}_3^+(\text{g})$. In the gas phase, $(\text{CH}_3)_3\text{N}$ is more basic than CH_3NH_2 , while in solution the reverse is true. Explain this observation.
151. Calculate the pH of a solution prepared from 0.200 mol of NH_4CN and enough water to make 1.00 L of solution.
152. To 1.0 L of a 0.30 M solution of HClO_2 is added 0.20 mol of NaF. Calculate the $[\text{HClO}_2]$ at equilibrium.
153. A mixture of Na_2CO_3 and NaHCO_3 has a mass of 82.2 g. It is dissolved in 1.00 L of water, and the pH is found to be 9.95. Determine the mass of NaHCO_3 in the mixture.
154. A mixture of NaCN and NaHSO_4 consists of a total of 0.60 mol. When the mixture is dissolved in 1.0 L of water and comes to equilibrium, the pH is found to be 9.9. Determine the amount of NaCN in the mixture.

CONCEPTUAL PROBLEMS

155. Without doing any calculations, determine which solution in each pair is more acidic.
- 0.0100 M in HCl and 0.0100 M in KOH
 - 0.0100 M in HF and 0.0100 M in KBr
 - 0.0100 M in NH_4Cl and 0.0100 M in $\text{CH}_3\text{NH}_3\text{Br}$
 - 0.100 M in NaCN and 0.100 M in CaCl_2
156. Without doing any calculations, determine which solution in each pair is more basic.
- 0.100 M in NaClO and 0.100 M in NaF
 - 0.0100 M in KCl and 0.0100 M in KClO_2
 - 0.0100 M in HNO_3 and 0.0100 M in NaOH
 - 0.0100 M in NH_4Cl and 0.0100 M in HCN

157. Rank the acids in order of increasing acid strength.



158. Without using a calculator, determine the pH and pOH of each solution. Rank the solutions from most acidic to most basic.
- 1.0×10^{-2} M HCl
 - 1.0×10^{-4} M HCl
 - 1.0×10^{-2} M NaOH
 - 1.0×10^{-4} M NaOH

QUESTIONS FOR GROUP WORK

Discuss these questions with the group and record your consensus answer.


159. Without referring to the text, go around your group and have each member mention a different property of either an acid or a base, such as “Acids turn blue litmus paper red.” Record as many properties as you can.
160. Have each group member make two flashcards with an acid or a base on one side and its conjugate on the other side. Check each other's cards and quiz each other until each group member is proficient at identifying conjugate pairs.
161. Answer the following in a complete sentence or two:
- How do you know if an acid is strong or weak?
 - How do you calculate the pH of a strong acid?
 - How do you calculate the pH of a weak acid solution?
 - If you know the K_a of an acid, how do you determine the K_b of its conjugate base?
 - If you know $[\text{OH}^-]$ for a solution, how do you determine $[\text{H}_3\text{O}^+]$?

Active Classroom Learning

162. Solve the following problem, taking turns in your group to explain how to do the next step: What is the pH when 5.3 g of sodium acetate, NaCH_3CO_2 , is dissolved in 100.0 mL of water? (The K_a of acetic acid, HCH_3CO_2 , is 1.8×10^{-5} .)
163. Define each of the following with complete sentences, and provide an example chemical equation: an Arrhenius acid, a Brønsted–Lowry base, and a Lewis acid.

DATA ANALYSIS AND INTERPRETATION

164. Sulfur dioxide is a common preservative in wine; it prevents oxidation and bacterial growth. When SO_2 is added to wine, it reacts with water to form an equilibrium system with the bisulfite ion:



In this equilibrium system, SO_2 is called “molecular SO_2 ”; in its HSO_3^- form, it is called “free SO_2 .” Only molecular SO_2 acts as a preservative. The amount of molecular SO_2 in the equilibrium

system is highly pH dependent—the lower the pH, the more the equilibrium shifts to the left and the greater the amount of free SO_2 . The recommended amount of free SO_2 is 0.8 ppm for white wine and 0.5 ppm for red wine. The table shows the amount of free SO_2 required to obtain the correct amount of molecular SO_2 as a function of pH for both red and white wine. For dilute solutions such as these, 1 ppm = 1 mg/L. Study the table and answer the questions.

pH	White Wine 0.8 ppm molecular SO ₂	Red Wine 0.5 ppm molecular SO ₂
3	13	8
3.05	15	9
3.1	16	10
3.15	19	12
3.2	21	13
3.25	23	15
3.3	26	16
3.35	29	18
3.4	32	20
3.45	37	23
3.5	40	25
3.55	46	29
3.6	50	31
3.65	57	36
3.7	63	39
3.75	72	45
3.8	79	49
3.85	91	57
3.9	99	62

▲ Amount of Free SO₂ Required to Maintain Correct Amount of Molecular SO₂ in White and Red Wine

- A 225-L barrel of white wine has an initial free SO₂ concentration of 22 ppm and a pH of 3.70. How much SO₂ (in grams) should be added to the barrel to result in the required SO₂ level?
- A 225-L barrel of red wine has an initial free SO₂ concentration of 11 ppm and a pH of 3.80. How much SO₂ (in grams) should be added to this barrel to result in the required SO₂ level?
- Gaseous SO₂ is highly toxic and can be difficult to handle, so winemakers often use potassium metabisulfite (K₂S₂O₅), also known as KMBS, as a source of SO₂ in wine. When KMBS is added to wine, the metabisulfite ion (S₂O₅²⁻) reacts with water to form the bisulfite ion (HSO₃⁻). Write the balanced equation for the reaction that occurs when the metabisulfite ion reacts with water.
- Determine the percent by mass of SO₂ in KMBS.
- How much KMBS must a winemaker add to the barrels of wine in problems (a) and (b) to achieve the required amount of molecular SO₂?

ANSWERS TO CONCEPTUAL CONNECTIONS

- Cc 16.1 (b) H₂SO₄ and H₂SO₃ are both acids; this is not a conjugate acid–base pair.
- Cc 16.2 (a) Because the carbon atom in (a) is bonded to another oxygen atom that draws electron density away from the O—H bond (weakening and polarizing it), and the carbon atom in (b) is bonded only to other hydrogen atoms, the proton in structure (a) is more acidic.
- Cc 16.3 HB has the largest K_a.
- Cc 16.4 The larger ionization constant indicates that HF is stronger.
- Cc 16.5 (b) As pH increases, acidity decreases.
- Cc 16.6 (c) The validity of the *x* is *small* approximation depends on both the value of the equilibrium constant and the initial concentration—the closer these are to one another, the less likely the approximation will be valid.
- Cc 16.7 (a) A weak acid solution will usually be less than 5% dissociated. Since HCl is a strong acid, the 0.10 M solution is much more acidic than either a weak acid with the same concentration or even a weak acid that is twice as concentrated.
- Cc 16.8 Solution (c) has the greatest percent ionization because percent ionization increases with decreasing weak acid concentration. Solution (b) has the lowest pH because the equilibrium H₃O⁺ concentration increases with increasing weak acid concentration.
- Cc 16.9 (a) A weak acid solution will usually be less than 5% dissociated. Therefore, because HCl is the only strong acid, the 1.0 M solution is much more acidic than either a weak acid that is twice as concentrated or a combination of two weak acids with the same concentrations.

17.1 The Danger of Antifreeze 739

17.2 Buffers: Solutions That Resist pH Change 740

17.3 Buffer Effectiveness: Buffer Range and Buffer Capacity 752

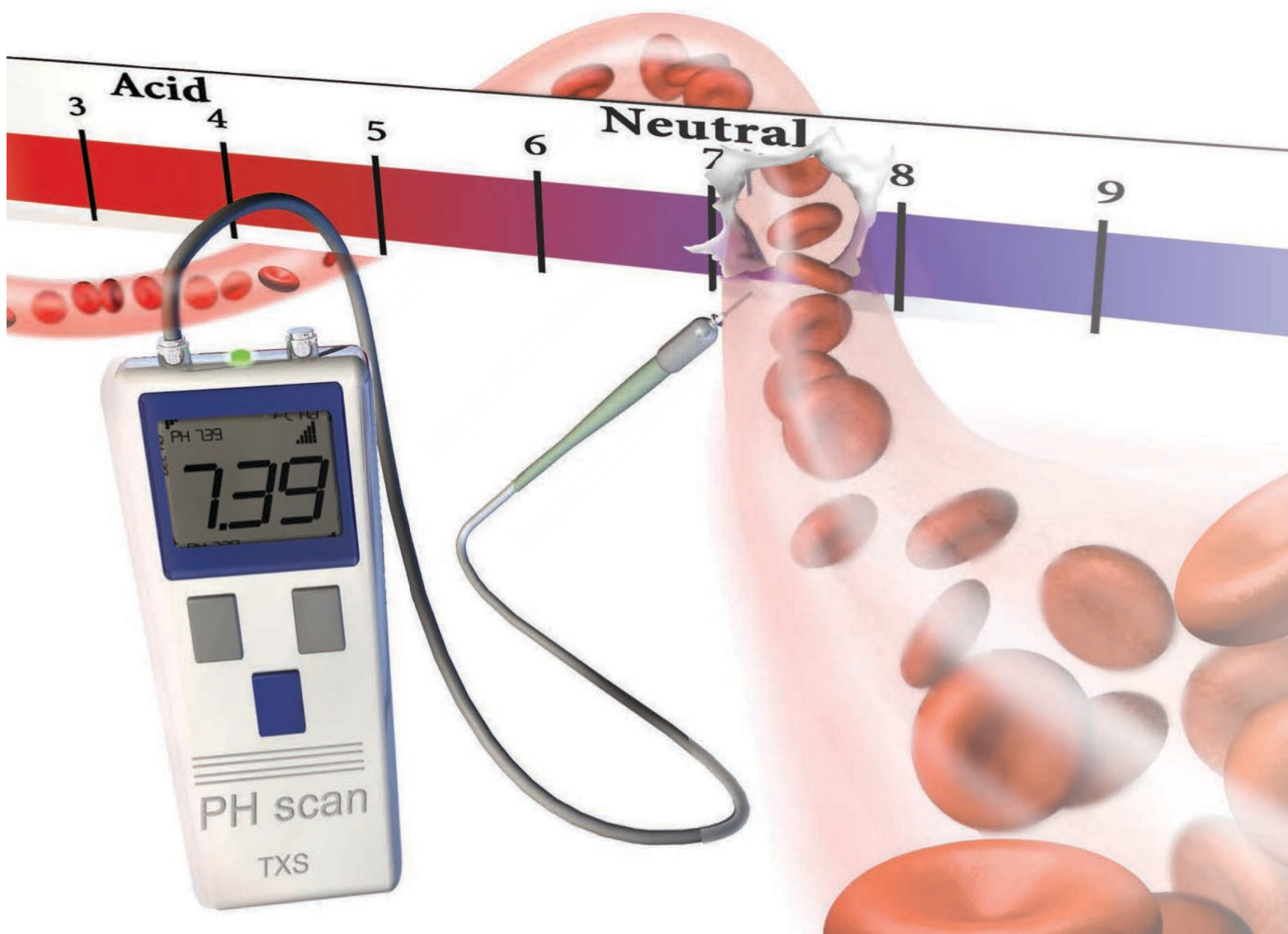
17.4 Titrations and pH Curves 755

17.5 Solubility Equilibria and the Solubility-Product Constant 769

17.6 Precipitation 775

17.7 Complex Ion Equilibria 778

Key Learning Outcomes 784



Human blood is held at nearly constant pH by the action of buffers, a main topic of this chapter.

Aqueous Ionic Equilibrium

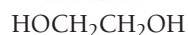
WE HAVE ALREADY seen the importance of aqueous solutions, first in Chapters 8, 13, and 15, and most recently in Chapter 16 on acids and bases. We now turn our attention to two additional topics involving aqueous solutions: buffers (solutions that resist pH change) and solubility equilibria (the extent to which slightly soluble ionic compounds dissolve in water). Buffers are tremendously important in biology because nearly all physiological processes must occur within a narrow pH range. Solubility equilibria are related to the solubility rules that we discussed in Chapter 8. In this chapter, we encounter a more complicated picture: solids that we considered insoluble under the simple “solubility rules” are actually better described as being only very slightly soluble, as the chapter-opening quotation from Otto Witt suggests. Solubility equilibria are important in predicting not only solubility, but also precipitation reactions that might occur when aqueous solutions are mixed.

“In the strictly scientific sense of the word, insolubility does not exist, and even those substances characterized by the most obstinate resistance to the solvent action of water may properly be designated as extraordinarily difficult of solution, not as insoluble.”

—Otto N. Witt (1853–1915)

17.1 The Danger of Antifreeze

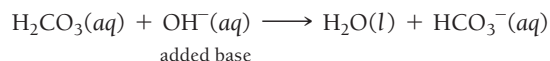
Every year, thousands of dogs and cats die from consuming a common household product: antifreeze that was improperly stored or that leaked out of a car radiator. Most types of antifreeze used in cars are aqueous solutions of ethylene glycol:



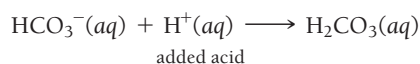
Some brands of antifreeze use propylene glycol, which is less toxic than ethylene glycol.

Ethylene glycol has a somewhat sweet taste that can attract curious dogs and cats—and sometimes even young children, who are also vulnerable to this toxic compound. The first stage of ethylene glycol poisoning is a state resembling drunkenness. Since the compound is an alcohol, it affects the brain much as an alcoholic beverage does. Once ethylene glycol begins to be metabolized, however, a second and more deadly stage commences.

In the liver, ethylene glycol is oxidized to glycolic acid (HOCH_2COOH), which enters the bloodstream. The acidity of blood is critically important and tightly regulated because many proteins only function in a narrow pH range. In human blood, for example, pH is held between 7.36 and 7.42. This nearly constant blood pH is maintained by *buffers*. We discuss buffers in more depth later in this chapter, but for now know that a buffer is a chemical system that resists pH changes by neutralizing added acid or base. An important buffer in blood is a mixture of carbonic acid (H_2CO_3) and the bicarbonate ion (HCO_3^-). The carbonic acid neutralizes added base:



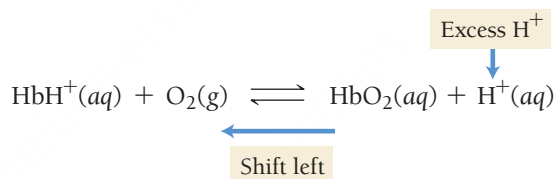
The bicarbonate ion neutralizes added acid:



In this way, the carbonic acid and bicarbonate ion buffering system keeps blood pH nearly constant.

When the glycolic acid generated by antifreeze consumption first enters the bloodstream, the acid's tendency to lower blood pH is countered by the buffering action of the bicarbonate ion. However, if the quantities of consumed antifreeze are large enough, the glycolic acid overwhelms the capacity of the buffer (we discuss buffer capacity in Section 17.3), causing blood pH to drop to dangerously low levels.

Low blood pH results in *acidosis*, a condition in which the acid affects the equilibrium between hemoglobin (Hb) and oxygen:



The excess acid causes the equilibrium to shift to the left, reducing the blood's ability to carry oxygen. At this point, the cat or dog may begin hyperventilating in an effort to overcome the acidic blood's lowered oxygen-carrying capacity. If no treatment is administered, the animal will eventually go into a coma and die.

One treatment for ethylene glycol poisoning is the administration of ethyl alcohol (the alcohol found in alcoholic beverages). The two molecules are similar enough in structure that the liver enzyme that catalyzes the metabolism of ethylene glycol also acts on ethyl alcohol, but the enzyme has a higher affinity for ethyl alcohol than for ethylene glycol. Consequently, the enzyme preferentially metabolizes ethyl alcohol, allowing the unmetabolized ethylene glycol to escape through the urine. If administered early, this treatment can save the life of a dog or cat that has consumed ethylene glycol.



KEY CONCEPT VIDEO
Buffers

17.2 Buffers: Solutions That Resist pH Change

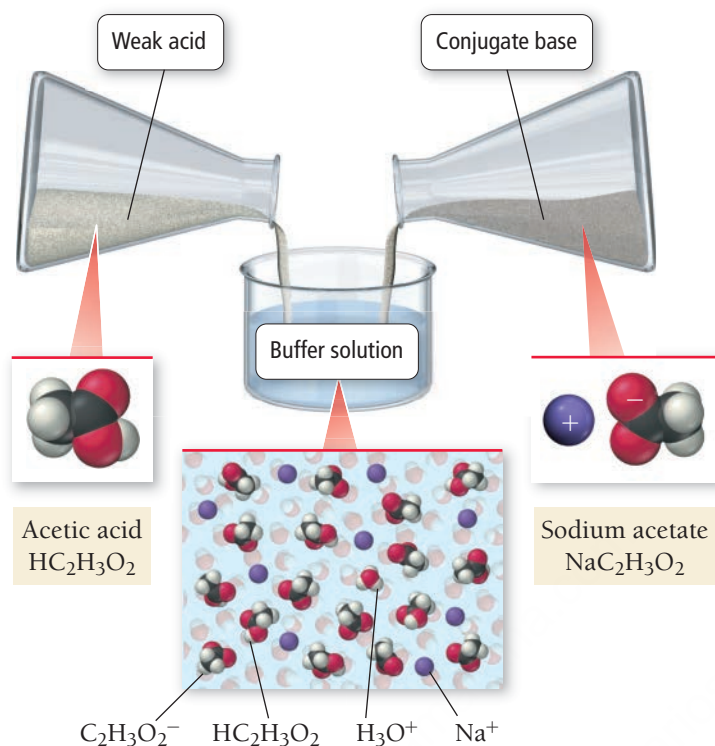
Most solutions significantly change pH when an acid or base is added to them. As we have just learned, however, a **buffer** resists pH change by neutralizing added acid or added base. A buffer contains either:

1. significant amounts of both a weak acid and its conjugate base or
2. significant amounts of both a weak base and its conjugate acid.

For example, the buffer in blood is composed of carbonic acid (H_2CO_3) and its conjugate base, the bicarbonate ion (HCO_3^-). When additional base is added to a buffer, the weak acid reacts with the base, neutralizing it. When additional acid is added to a buffer, the conjugate base reacts with the acid, neutralizing it. In this way, a buffer can maintain a nearly constant pH.

A weak acid by itself, even though it partially ionizes to form some of its conjugate base, does not contain sufficient base to be a buffer. Similarly, a weak base by itself, even though it partially ionizes water to form some of its conjugate acid, does not contain sufficient acid to be a buffer.

Formation of a Buffer



◀ FIGURE 17.1 A Buffer Solution

A buffer typically consists of a weak acid (which can neutralize added base) and its conjugate base (which can neutralize added acid).

A buffer must contain significant amounts of both a weak acid and its conjugate base (or vice versa). Consider the simple buffer made by dissolving acetic acid (HC₂H₃O₂) and sodium acetate (NaC₂H₃O₂) in water (**Figure 17.1** ▲).

Suppose that we add a strong base, such as NaOH, to this solution. The acetic acid neutralizes the base:



As long as the amount of added NaOH is less than the amount of HC₂H₃O₂ in solution, the buffer neutralizes the added NaOH and the resulting pH change is small. Suppose, on the other hand, that we add a strong acid, such as HCl, to the solution. In this case, the conjugate base, NaC₂H₃O₂, neutralizes the added HCl:



As long as the amount of added HCl is less than the amount of NaC₂H₃O₂ in solution, the buffer neutralizes the added HCl and the resulting pH change is small.

C₂H₃O₂⁻ is the conjugate base of HC₂H₃O₂.

Summarizing Buffer Characteristics:

- Buffers resist pH change.
- A buffer contains significant amounts of either: (1) a weak acid and its conjugate base, or (2) a weak base and its conjugate acid.
- The weak acid neutralizes added base.
- The weak base neutralizes added acid.

Which solution is a buffer?

- a solution that is 0.100 M in HNO₂ and 0.100 M in HCl
- a solution that is 0.100 M in HNO₃ and 0.100 M in NaNO₃
- a solution that is 0.100 M in HNO₂ and 0.100 M in NaCl
- a solution that is 0.100 M in HNO₂ and 0.100 M in NaNO₂

Buffers


17.1

Cc

Conceptual
Connection

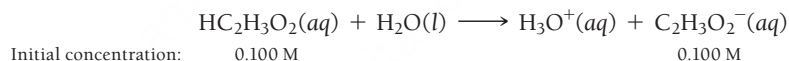
► FIGURE 17.2 The Common Ion

Effect The pH of a 0.100 M acetic acid solution is 2.90. The pH of a 0.100 M sodium acetate solution is 8.90. The pH of a solution that is 0.100 M in acetic acid and 0.100 M in sodium acetate is 4.70. (The solution contains an indicator that causes the color differences.)



Calculating the pH of a Buffer Solution

In Chapter 16, we learned how to calculate the pH of a solution containing either a weak acid or its conjugate base, but not both. How do we calculate the pH of a buffer—a solution containing both? Consider a solution that initially contains $\text{HC}_2\text{H}_3\text{O}_2$ and $\text{NaC}_2\text{H}_3\text{O}_2$, each at a concentration of 0.100 M. The acetic acid ionizes according to the reaction:



However, the ionization of $\text{HC}_2\text{H}_3\text{O}_2$ in this solution is suppressed compared to its ionization in a solution that does not initially contain any $\text{C}_2\text{H}_3\text{O}_2^-$. Why?

To answer this question, consider an aqueous solution of only $\text{HC}_2\text{H}_3\text{O}_2$ at equilibrium. What happens to the position of the equilibrium if we add $\text{C}_2\text{H}_3\text{O}_2^-$ to the solution? According to Le Châtelier's principle, the reaction shifts to the left, so that less of the $\text{HC}_2\text{H}_3\text{O}_2$ is ionized. In other words, the presence of the $\text{C}_2\text{H}_3\text{O}_2^-$ ion causes the acid to ionize even less than it normally would (**Figure 17.2** ▲), resulting in a less acidic solution (higher pH). This effect is known as the **common ion effect**, so named because the solution contains two substances ($\text{HC}_2\text{H}_3\text{O}_2$ and $\text{NaC}_2\text{H}_3\text{O}_2$) that share a common ion ($\text{C}_2\text{H}_3\text{O}_2^-$). To determine the pH of a buffer solution containing common ions, we work an equilibrium problem in which the initial concentrations include both the acid and its conjugate base, as demonstrated in Example 17.1.

Le Châtelier's principle is discussed in Section 15.9.


EXAMPLE 17.1

Calculating the pH of a Buffer Solution

Calculate the pH of a buffer solution that is 0.100 M in $\text{HC}_2\text{H}_3\text{O}_2$ and 0.100 M in $\text{NaC}_2\text{H}_3\text{O}_2$.

SOLUTION

- Write the balanced equation for the ionization of the acid and use it as a guide to prepare an ICE table showing the given concentrations of the acid and its conjugate base as the initial concentrations. Leave room in the table for the changes in concentrations and for the equilibrium concentrations.



	$[\text{HC}_2\text{H}_3\text{O}_2]$	$[\text{H}_3\text{O}^+]$	$[\text{C}_2\text{H}_3\text{O}_2^-]$
Initial	0.100	~0.00	0.100
Change			
Equil			

2. Represent the change in the concentration of H_3O^+ with the variable x . Express the changes in the concentrations of the other reactants and products in terms of x .

$$\text{HC}_2\text{H}_3\text{O}_2(aq) + \text{H}_2\text{O}(l) \rightleftharpoons \text{H}_3\text{O}^+(aq) + \text{C}_2\text{H}_3\text{O}_2^-(aq)$$

	$[\text{HC}_2\text{H}_3\text{O}_2]$	$[\text{H}_3\text{O}^+]$	$[\text{C}_2\text{H}_3\text{O}_2^-]$
Initial	0.100	≈ 0.00	0.100
Change	$-x$	$+x$	$+x$
Equil			

3. Sum each column to determine the equilibrium concentrations in terms of the initial concentrations and the variable x .

$$\text{HC}_2\text{H}_3\text{O}_2(aq) + \text{H}_2\text{O}(l) \rightleftharpoons \text{H}_3\text{O}^+(aq) + \text{C}_2\text{H}_3\text{O}_2^-(aq)$$

	$[\text{HC}_2\text{H}_3\text{O}_2]$	$[\text{H}_3\text{O}^+]$	$[\text{C}_2\text{H}_3\text{O}_2^-]$
Initial	0.100	≈ 0.00	0.100
Change	$-x$	$+x$	$+x$
Equil	$0.100 - x$	x	$0.100 + x$

4. Substitute the expressions for the equilibrium concentrations (from Step 3) into the expression for the acid ionization constant.

In most cases, you can make the approximation that x is *small*. (See Sections 15.8 and 16.7 to review the x is *small* approximation.)

Substitute the value of the acid ionization constant (from Table 17.5) into the K_a expression and solve for x .

Confirm that x is *small* by calculating the ratio of x and the number it was subtracted from in the approximation. For the approximation to be valid, the ratio must be less than 0.05 (or 5%).

$$K_a = \frac{[\text{H}_3\text{O}^+][\text{C}_2\text{H}_3\text{O}_2^-]}{[\text{HC}_2\text{H}_3\text{O}_2]}$$
$$= \frac{x(0.100 + x)}{0.100 - x} \quad (x \text{ is small})$$
$$1.8 \times 10^{-5} = \frac{x(0.100)}{0.100}$$
$$x = 1.8 \times 10^{-5}$$
$$\frac{1.8 \times 10^{-5}}{0.100} \times 100\% = 0.018\%$$

Therefore, the approximation is valid.

5. Determine the H_3O^+ concentration from the calculated value of x and substitute into the pH equation to find pH.

$$[\text{H}_3\text{O}^+] = x = 1.8 \times 10^{-5} \text{ M}$$
$$\text{pH} = -\log[\text{H}_3\text{O}^+]$$
$$= -\log(1.8 \times 10^{-5})$$
$$= 4.74$$

FOR PRACTICE 17.1


Calculate the pH of a buffer solution that is 0.200 M in $\text{HC}_2\text{H}_3\text{O}_2$ and 0.100 M in $\text{NaC}_2\text{H}_3\text{O}_2$.

FOR MORE PRACTICE 17.1

Calculate the pH of the buffer that results from mixing 60.0 mL of 0.250 M HCHO_2 and 15.0 mL of 0.500 M NaCHO_2 .

The Henderson–Hasselbalch Equation

We can derive an equation that relates the pH of a buffer solution to the initial concentration of the buffer components and simplify the calculation of the pH of a buffer solution. Consider a buffer containing the generic weak acid HA and its conjugate base A^- . The acid ionizes as follows:



We derive an expression for the concentration of H_3O^+ from the acid ionization equilibrium expression by solving the expression for $[\text{H}_3\text{O}^+]$:

$$K_a = \frac{[\text{H}_3\text{O}^+][\text{A}^-]}{[\text{HA}]}$$

$$[\text{H}_3\text{O}^+] = K_a \frac{[\text{HA}]}{[\text{A}^-]} \quad [17.1]$$

Recall that the variable x in a weak acid equilibrium problem represents the change in the initial acid concentration. The x is *small* approximation is valid because so little of the weak acid ionizes compared to its initial concentration.

If we make the same x is *small* approximation that we make for weak acid or weak base equilibrium problems, we can consider the equilibrium concentrations of HA and A^- to be essentially identical to the initial concentrations of HA and A^- (see Step 4 of Example 17.1). Therefore, to determine $[\text{H}_3\text{O}^+]$ for any buffer solution, we multiply K_a by the ratio of the concentrations of the acid and the conjugate base. To find the $[\text{H}_3\text{O}^+]$ of the buffer in Example 17.1 (a solution that is 0.100 M in $\text{HC}_2\text{H}_3\text{O}_2$ and 0.100 M in $\text{NaC}_2\text{H}_3\text{O}_2$), we substitute the concentrations of $\text{HC}_2\text{H}_3\text{O}_2$ and $\text{C}_2\text{H}_3\text{O}_2^-$ into Equation 17.1:

$$[\text{H}_3\text{O}^+] = K_a \frac{[\text{HC}_2\text{H}_3\text{O}_2]}{[\text{C}_2\text{H}_3\text{O}_2^-]}$$

$$= K_a \frac{0.100}{0.100}$$

$$= K_a$$

In this buffer solution, as in any solution in which the acid and conjugate base concentrations are equal, $[\text{H}_3\text{O}^+]$ is equal to K_a .

We can derive an equation for the pH of a buffer by taking the negative logarithm of both sides of Equation 17.1:

$$[\text{H}_3\text{O}^+] = K_a \frac{[\text{HA}]}{[\text{A}^-]}$$

$$-\log[\text{H}_3\text{O}^+] = -\log\left(K_a \frac{[\text{HA}]}{[\text{A}^-]}\right)$$

$$-\log[\text{H}_3\text{O}^+] = -\log K_a - \log \frac{[\text{HA}]}{[\text{A}^-]} \quad [17.2]$$

Recall that $\log AB = \log A + \log B$, so $-\log AB = -\log A - \log B$.

We rearrange Equation 17.2 to get:

$$-\log[\text{H}_3\text{O}^+] = -\log K_a + \log \frac{[\text{A}^-]}{[\text{HA}]}$$

Recall that $\log(A/B) = -\log(B/A)$, so $-\log(A/B) = \log(B/A)$.

Since $\text{pH} = -\log[\text{H}_3\text{O}^+]$ and since $\text{p}K_a = -\log K_a$, we obtain the result:

$$\text{pH} = \text{p}K_a + \log \frac{[\text{A}^-]}{[\text{HA}]}$$

Since A^- is a weak base and HA is a weak acid, we can generalize the equation:

$$\text{pH} = \text{p}K_a + \log \frac{[\text{base}]}{[\text{acid}]} \quad [17.3]$$

Note that, as expected, the pH of a buffer increases with an increase in the amount of base relative to the amount of acid.

where the base is the conjugate base of the acid or the acid is the conjugate acid of the base. This equation, known as the **Henderson–Hasselbalch equation**, allows us to quickly calculate the pH of a buffer solution from the initial concentrations of the buffer components *as long as the x is small approximation is valid*. In Example 17.2, we demonstrate two ways to find the pH of a buffer: in the left column we solve a common ion effect equilibrium problem using a method similar to the one we used in Example 17.1; in the right column we use the Henderson–Hasselbalch equation.

EXAMPLE 17.2

Calculating the pH of a Buffer Solution as an Equilibrium Problem and with the Henderson–Hasselbalch Equation

Interactive
Worked Example
Video 17.2

PEARSON
eText
2.0

Calculate the pH of a buffer solution that is 0.050 M in benzoic acid ($\text{HC}_7\text{H}_5\text{O}_2$) and 0.150 M in sodium benzoate ($\text{NaC}_7\text{H}_5\text{O}_2$). For benzoic acid, $K_a = 6.5 \times 10^{-5}$.

SOLUTION

Equilibrium Approach	Henderson–Hasselbalch Approach																
<p>Write the balanced equation for the ionization of the acid and use it as a guide to prepare an ICE table.</p> $\text{HC}_7\text{H}_5\text{O}_2(aq) + \text{H}_2\text{O}(l) \rightleftharpoons \text{H}_3\text{O}^+(aq) + \text{C}_7\text{H}_5\text{O}_2^-(aq)$ <table><tr><th></th><th>$[\text{HC}_7\text{H}_5\text{O}_2]$</th><th>$[\text{H}_3\text{O}^+]$</th><th>$[\text{C}_7\text{H}_5\text{O}_2^-]$</th></tr><tr><td>Initial</td><td>0.050</td><td>≈ 0.00</td><td>0.150</td></tr><tr><td>Change</td><td>$-x$</td><td>$+x$</td><td>$+x$</td></tr><tr><td>Equil</td><td>$0.050 - x$</td><td>x</td><td>$0.150 - x$</td></tr></table> <p>Substitute the expressions for the equilibrium concentrations into the expression for the acid ionization constant. Make the x is <i>small</i> approximation and solve for x.</p> $K_a = \frac{[\text{H}_3\text{O}^+][\text{C}_7\text{H}_5\text{O}_2^-]}{[\text{HC}_7\text{H}_5\text{O}_2]}$ $= \frac{x(0.150 + x)}{0.050 - x} (x \text{ is small})$ $6.5 \times 10^{-5} = \frac{x(0.150)}{0.050}$ $x = 2.2 \times 10^{-5}$ <p>Since $[\text{H}_3\text{O}^+] = x$, you calculate pH as follows:</p> $\text{pH} = -\log[\text{H}_3\text{O}^+]$ $= -\log(2.2 \times 10^{-5})$ $= 4.66$ <p>Confirm that the x is <i>small</i> approximation is valid by calculating the ratio of x to the smallest number it was subtracted from in the approximation. For the approximation to be valid the ratio must be less than 0.05 (or 5%). (See Sections 15.8 and 16.7 to review the x is <i>small</i> approximation.)</p> $\frac{2.2 \times 10^{-5}}{0.050} \times 100\% = 0.044\%$ <p>The approximation is valid.</p>		$[\text{HC}_7\text{H}_5\text{O}_2]$	$[\text{H}_3\text{O}^+]$	$[\text{C}_7\text{H}_5\text{O}_2^-]$	Initial	0.050	≈ 0.00	0.150	Change	$-x$	$+x$	$+x$	Equil	$0.050 - x$	x	$0.150 - x$	<p>To find the pH of this solution, determine which component is the acid and which is the base and substitute their concentrations into the Henderson–Hasselbalch equation to calculate pH. $\text{HC}_7\text{H}_5\text{O}_2$ is the acid and $\text{NaC}_7\text{H}_5\text{O}_2$ is the base. Therefore, you calculate the pH as follows:</p> $\text{pH} = \text{p}K_a + \log \frac{[\text{base}]}{[\text{acid}]}$ $= -\log(6.5 \times 10^{-5}) + \log \frac{0.150}{0.050}$ $= 4.187 + 0.477 = 4.66$ <p>Confirm that the x is <i>small</i> approximation is valid by calculating the $[\text{H}_3\text{O}^+]$ from the pH. Since $[\text{H}_3\text{O}^+]$ is formed by ionization of the acid, the calculated $[\text{H}_3\text{O}^+]$ has to be less than 0.05 (or 5%) of the initial concentration of the acid in order for the x is <i>small</i> approximation to be valid.</p> $\text{pH} = 4.66 = -\log[\text{H}_3\text{O}^+]$ $[\text{H}_3\text{O}^+] = 10^{-4.66} = 2.2 \times 10^{-5} \text{ M}$ $\frac{2.2 \times 10^{-5}}{0.050} \times 100\% = 0.044\%$ <p>The approximation is valid.</p>
	$[\text{HC}_7\text{H}_5\text{O}_2]$	$[\text{H}_3\text{O}^+]$	$[\text{C}_7\text{H}_5\text{O}_2^-]$														
Initial	0.050	≈ 0.00	0.150														
Change	$-x$	$+x$	$+x$														
Equil	$0.050 - x$	x	$0.150 - x$														

FOR PRACTICE 17.2

Calculate the pH of a buffer solution that is 0.250 M in HCN and 0.170 M in KCN. For HCN, $K_a = 4.9 \times 10^{-10}$ ($\text{p}K_a = 9.31$). Use both the equilibrium approach and the Henderson–Hasselbalch approach.

How do you decide whether to use the equilibrium approach or the Henderson–Hasselbalch equation when calculating the pH of buffer solutions? The answer depends on the specific problem. In cases where you can make the x is *small* approximation, the Henderson–Hasselbalch equation is adequate. However, as you can see from Example 17.2, checking the x is *small* approximation is not as convenient with the Henderson–Hasselbalch equation (because the approximation is implicit). Thus, the equilibrium approach, though lengthier, gives you a better sense of the important quantities in the problem and the nature of the approximation.

When first working buffer problems, use the equilibrium approach until you get a good sense for when the x is *small* approximation is valid. Then, you can switch to the more streamlined approach in cases where the approximation applies (and only in those cases). In general, remember that the x is *small* approximation applies to problems in which both of the following are true: (a) the initial concentrations of acids (and/or bases) are not too dilute; and (b) the equilibrium constant is fairly small. Although the exact values depend on the details of the problem, for many buffer problems this means that the initial concentrations of acids and conjugate bases should be at least 10^2 – 10^3 times greater than the equilibrium constant (depending on the required accuracy).



17.2
Cc

Conceptual
Connection

pH of Buffer Solutions

A buffer contains the weak acid HA and its conjugate base A[−]. The weak acid has a pK_a of 4.82, and the buffer has a pH of 4.25. Which statement is true of the relative concentrations of the weak acid and conjugate base in the buffer?

- (a) [HA] > [A[−]] (b) [HA] < [A[−]] (c) [HA] = [A[−]]

Which buffer component would you add to change the pH of the buffer to 4.72?



KEY CONCEPT VIDEO
Finding pH and pH Changes
in Buffer Solutions

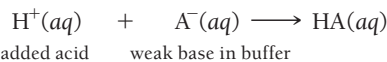
Calculating pH Changes in a Buffer Solution

When we add acid or base to a buffer, the buffer resists a pH change. Nonetheless, the pH does change by a small amount. Calculating the pH change in a buffer solution requires breaking up the problem into two parts:

1. The **stoichiometry calculation** in which we calculate how the addition changes the relative amounts of acid and conjugate base.
2. The **equilibrium calculation** in which we calculate the pH based on the new amounts of acid and conjugate base.

We demonstrate this calculation with a 1.0-L buffer solution that is 0.100 M in the generic acid HA and 0.100 M in its conjugate base A[−]. Since the concentrations of the weak acid and the conjugate base are equal, the pH of the buffer is equal to pK_a. Let's calculate the pH of the solution after we add 0.025 mol of strong acid (H⁺) (assuming that the change in volume from adding the acid is negligible).

The Stoichiometry Calculation As the added acid is neutralized, it converts a stoichiometric amount of the base into its conjugate acid through the neutralization reaction (**Figure 17.3a** ▶):



Neutralizing 0.025 mol of the strong acid (H⁺) requires 0.025 mol of the weak base (A[−]). Consequently, the amount of A[−] *decreases* by 0.025 mol, and the amount of HA *increases* by 0.025 mol (because of the 1:1:1 stoichiometry of the neutralization reaction). We track these changes in tabular form as follows:

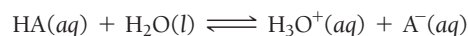
It is best to work with amounts in moles instead of concentrations when tracking these changes.

	H ⁺ (aq)	+	A [−] (aq)	→	HA(aq)
Before addition	≈ 0.00 mol		0.100 mol		0.100 mol
Addition	+0.025 mol		−		−
After addition	≈ 0.00 mol		0.075 mol		0.125 mol

Notice that this table is not an ICE table. This table simply tracks the stoichiometric changes that occur during the neutralization of the added acid. We write ≈ 0.00 mol for the amount of H^+ because the amount is so small compared to the amounts of A^- and HA . (Remember that weak acids ionize only to a small extent and that the presence of the common ion further suppresses the ionization.) The amount of H^+ , of course, is not *exactly* zero, as we can see by completing the equilibrium part of the calculation.

The Equilibrium Calculation We have just seen that adding a small amount of acid to a buffer is equivalent to changing the initial concentrations of the acid and conjugate base present in the buffer (in this case, since the volume is 1.0 L, $[\text{HA}]$ increased from 0.100 M to 0.125 M and $[\text{A}^-]$ decreased from 0.100 M to 0.075 M). Knowing these new initial concentrations, we can calculate the new pH in the same way that we calculate the pH of any buffer: either by working a full equilibrium problem or by using the Henderson–Hasselbalch equation (see Examples 17.1 and 17.2). In this case, we work the full equilibrium problem.

We begin by writing the balanced equation for the ionization of the acid and using it as a guide to prepare an ICE table. The initial concentrations for the ICE table are those that we calculated in the stoichiometry part of the calculation:



	[HA]	[H ₃ O ⁺]	[A [−]]
Initial	0.125	≈ 0.00	0.075
Change	$-x$	$+x$	$+x$
Equil	$0.125 - x$	x	$0.075 + x$

From stoichiometry calculation

We then substitute the expressions for the equilibrium concentrations into the expression for the acid ionization constant. As long as K_a is sufficiently small relative to the initial concentrations, we can make the x is *small* approximation and solve for x , which is equal to $[\text{H}_3\text{O}^+]$.

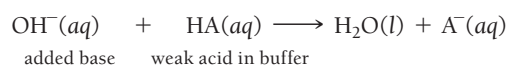
$$\begin{aligned}
 K_a &= \frac{[\text{H}_3\text{O}^+][\text{A}^-]}{[\text{HA}]} \\
 &= \frac{x(0.075 + x)}{0.125 - x} \quad (x \text{ is small}) \\
 K_a &= \frac{x(0.075)}{0.125} \\
 x = [\text{H}_3\text{O}^+] &= K_a \frac{0.125}{0.075}
 \end{aligned}$$

Once we calculate $[\text{H}_3\text{O}^+]$, we can calculate the pH with the equation $\text{pH} = -\log[\text{H}_3\text{O}^+]$.

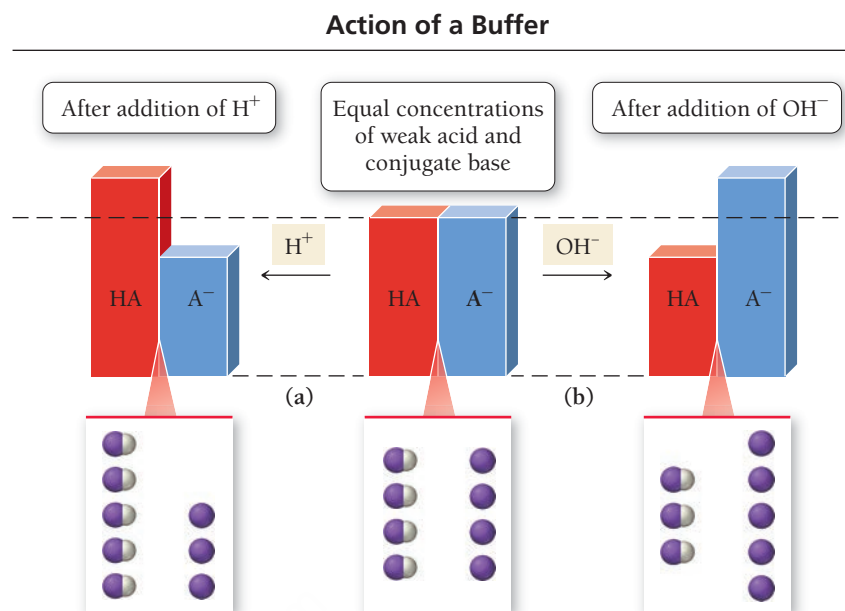
Notice that, since the expression for x contains a *ratio* of concentrations $[\text{HA}]/[\text{A}^-]$, we can substitute the *amounts of acid and base in moles* in place of concentration because, in a single buffer solution, the volume is the same for both the acid and the base. Therefore, the volumes cancel:

$$[\text{HA}]/[\text{A}^-] = \frac{\frac{n_{\text{HA}}}{V}}{\frac{n_{\text{A}^-}}{V}} = n_{\text{HA}}/n_{\text{A}^-}$$

The effect of adding a small amount of strong base to the buffer is exactly the opposite of adding acid. The added base converts a stoichiometric amount of the acid into its conjugate base through the neutralization reaction (**Figure 17.3b** ► on the next page):



► **FIGURE 17.3 Buffering Action** (a) When an acid is added to a buffer, a stoichiometric amount of the weak base is converted to the conjugate acid. (b) When a base is added to a buffer, a stoichiometric amount of the weak acid is converted to the conjugate base.



If we add 0.025 mol of OH^- , the amount of A^- goes up by 0.025 mol and the amount of HA goes down by 0.025 mol as shown in the following table:

	$\text{OH}^-(\text{aq})$	+	$\text{HA}(\text{aq})$	\longrightarrow	$\text{H}_2\text{O}(\text{l})$	+	$\text{A}^-(\text{aq})$
Before addition	≈ 0.00 mol		0.100 mol				0.100 mol
Addition	+0.025 mol		—				—
After addition	≈ 0.00 mol		0.075 mol				0.125 mol

When you calculate the pH of a buffer after adding small amounts of acid or base, remember the following:

- Adding a small amount of strong acid to a buffer converts a stoichiometric amount of the base to the conjugate acid and decreases the pH of the buffer. (Adding acid decreases pH just as we would expect.)
- Adding a small amount of strong base to a buffer converts a stoichiometric amount of the acid to the conjugate base and increases the pH of the buffer. (Adding base increases the pH just as we would expect.)

Example 17.3 and the For Practice Problems that follow it involve calculating pH changes in a buffer solution after small amounts of strong acid or strong base are added. As we have seen, these problems generally have two parts:

- Part I. Stoichiometry—use the stoichiometry of the neutralization equation to calculate the changes in the amounts (in moles) of the buffer components upon addition of the acid or base.
- Part II. Equilibrium—use the new amounts of buffer components to work an equilibrium problem to find pH. (For most buffers, this can also be done with the Henderson–Hasselbalch equation.)

The easiest way to remember these changes is relatively simple: adding acid creates more acid; adding base creates more base.



17.3
Cc

Conceptual
Connection

Buffering Action

Closely examine Figure 17.3. Which image best represents the amount of OH^- added to the buffer in part b. of the figure?



EXAMPLE 17.3

Calculating the pH Change in a Buffer Solution after the Addition of a Small Amount of Strong Acid or Base

Interactive
Worked Example
Video 17.3

PEARSON
eText
2.0

A 1.0-L buffer solution contains 0.100 mol HC₂H₃O₂ and 0.100 mol NaC₂H₃O₂. The value of K_a for HC₂H₃O₂ is 1.8 × 10^{−5}. Because the initial amounts of acid and conjugate base are equal, the pH of the buffer is equal to pK_a = −log(1.8 × 10^{−5}) = 4.74. Calculate the new pH after adding 0.010 mol of solid NaOH to the buffer. For comparison, calculate the pH after adding 0.010 mol of solid NaOH to 1.0 L of pure water. (Ignore any small changes in volume that might occur upon addition of the base.)

SOLUTION

Part I: Stoichiometry. The addition of the base converts a stoichiometric amount of acid to the conjugate base (adding base creates more base). Write an equation showing the neutralization reaction and then set up a table to track the changes.	<table><tr><th></th><th colspan="4">$\text{OH}^-(aq) + \text{HC}_2\text{H}_3\text{O}_2(aq) \longrightarrow \text{H}_2\text{O}(l) + \text{C}_2\text{H}_3\text{O}_2^-(aq)$</th></tr><tr><td>Before addition</td><td>$\approx 0.00 \text{ mol}$</td><td>0.100 mol</td><td></td><td>0.100 mol</td></tr><tr><td>Addition</td><td>0.010 mol</td><td>—</td><td></td><td>—</td></tr><tr><td>After addition</td><td>$\approx 0.00 \text{ mol}$</td><td>0.090 mol</td><td></td><td>0.110 mol</td></tr></table>		$\text{OH}^-(aq) + \text{HC}_2\text{H}_3\text{O}_2(aq) \longrightarrow \text{H}_2\text{O}(l) + \text{C}_2\text{H}_3\text{O}_2^-(aq)$				Before addition	$\approx 0.00 \text{ mol}$	0.100 mol		0.100 mol	Addition	0.010 mol	—		—	After addition	$\approx 0.00 \text{ mol}$	0.090 mol		0.110 mol
	$\text{OH}^-(aq) + \text{HC}_2\text{H}_3\text{O}_2(aq) \longrightarrow \text{H}_2\text{O}(l) + \text{C}_2\text{H}_3\text{O}_2^-(aq)$																				
Before addition	$\approx 0.00 \text{ mol}$	0.100 mol		0.100 mol																	
Addition	0.010 mol	—		—																	
After addition	$\approx 0.00 \text{ mol}$	0.090 mol		0.110 mol																	
Part II: Equilibrium. Write the balanced equation for the ionization of the acid and use it as a guide to prepare an ICE table. Use the amounts of acid and conjugate base from part I as the initial amounts of acid and conjugate base in the ICE table.	$\text{HC}_2\text{H}_3\text{O}_2(aq) + \text{H}_2\text{O}(l) \rightleftharpoons \text{H}_3\text{O}^+(aq) + \text{C}_2\text{H}_3\text{O}_2^-(aq)$ <table><tr><th></th><th>$[\text{HC}_2\text{H}_3\text{O}_2]$</th><th>$[\text{H}_3\text{O}^+]$</th><th>$[\text{C}_2\text{H}_3\text{O}_2^-]$</th></tr><tr><td>Initial</td><td>0.090</td><td>≈ 0.00</td><td>0.110</td></tr><tr><td>Change</td><td>$-x$</td><td>$+x$</td><td>$+x$</td></tr><tr><td>Equil</td><td>$0.090 - x$</td><td>x</td><td>$0.110 + x$</td></tr></table>		$[\text{HC}_2\text{H}_3\text{O}_2]$	$[\text{H}_3\text{O}^+]$	$[\text{C}_2\text{H}_3\text{O}_2^-]$	Initial	0.090	≈ 0.00	0.110	Change	$-x$	$+x$	$+x$	Equil	$0.090 - x$	x	$0.110 + x$				
	$[\text{HC}_2\text{H}_3\text{O}_2]$	$[\text{H}_3\text{O}^+]$	$[\text{C}_2\text{H}_3\text{O}_2^-]$																		
Initial	0.090	≈ 0.00	0.110																		
Change	$-x$	$+x$	$+x$																		
Equil	$0.090 - x$	x	$0.110 + x$																		
Substitute the expressions for the equilibrium concentrations of acid and conjugate base into the expression for the acid ionization constant. Make the <i>x is small</i> approximation and solve for <i>x</i> . Calculate the pH from the value of <i>x</i> , which is equal to $[\text{H}_3\text{O}^+]$.	$K_a = \frac{[\text{H}_3\text{O}^+][\text{C}_2\text{H}_3\text{O}_2^-]}{[\text{HC}_2\text{H}_3\text{O}_2]}$ $= \frac{x(0.110 + x)}{0.090 - x} (x \text{ is small})$ $1.8 \times 10^{-5} = \frac{x(0.110)}{0.090}$ $x = [\text{H}_3\text{O}^+] = 1.47 \times 10^{-5} \text{ M}$ $\text{pH} = -\log[\text{H}_3\text{O}^+]$ $= -\log(1.47 \times 10^{-5})$ $= 4.83$																				
Confirm the validity of the <i>x is small</i> approximation by calculating the ratio of <i>x</i> to the smallest number it was subtracted from in the approximation. The ratio must be less than 0.05 (or 5%).	$\frac{1.47 \times 10^{-5}}{0.090} \times 100\% = 0.016\%$ <p>The approximation is valid.</p>																				
Part II: Equilibrium Alternative (using the Henderson–Hasselbalch equation). As long as the <i>x is small</i> approximation is valid, you can substitute the quantities of acid and conjugate base after the addition (from part I) into the Henderson–Hasselbalch equation and calculate the new pH.	$\text{pH} = \text{p}K_a + \log \frac{[\text{base}]}{[\text{acid}]}$ $= -\log(1.8 \times 10^{-5}) + \log \frac{0.110}{0.090}$ $= 4.74 + 0.087$ $= 4.83$																				

—Continued on the next page

Continued from the previous page—

The pH of 1.0 L of water after adding 0.010 mol of NaOH is calculated from the $[\text{OH}^-]$. For a strong base, $[\text{OH}^-]$ is simply the number of moles of OH^- divided by the number of liters of solution.

$$\begin{aligned}
 [\text{OH}^-] &= \frac{0.010 \text{ mol}}{1.0 \text{ L}} = 0.010 \text{ M} \\
 \text{pOH} &= -\log[\text{OH}^-] = -\log(0.010) \\
 &= 2.00 \\
 \text{pOH} + \text{pH} &= 14.00 \\
 \text{pH} &= 14.00 - \text{pOH} \\
 &= 14.00 - 2.00 \\
 &= 12.00
 \end{aligned}$$

CHECK Notice that the buffer solution changed from pH = 4.74 to pH = 4.83 upon addition of the base (a small fraction of a single pH unit). In contrast, the pure water changed from pH = 7.00 to pH = 12.00, five whole pH units (a factor of 10^5). Notice also that even the buffer solution got slightly more basic upon addition of a base, as you would expect. To check your answer, always make sure the pH goes in the direction you expect: adding base should make the solution more basic (higher pH); adding acid should make the solution more acidic (lower pH).

FOR PRACTICE 17.3

Calculate the pH of the solution in Example 17.3 upon addition of 0.015 mol of NaOH to the original buffer.

FOR MORE PRACTICE 17.3

Calculate the pH of the solution in Example 17.3 upon addition of 10.0 mL of 1.00 M HCl to the original buffer in Example 17.3.



17.4 Cc

Conceptual
Connection

Adding Acid or Base to a Buffer

A buffer contains equal amounts of a weak acid and its conjugate base and has a pH of 5.25. Which is a reasonable value of buffer pH after the addition of a small amount of acid?

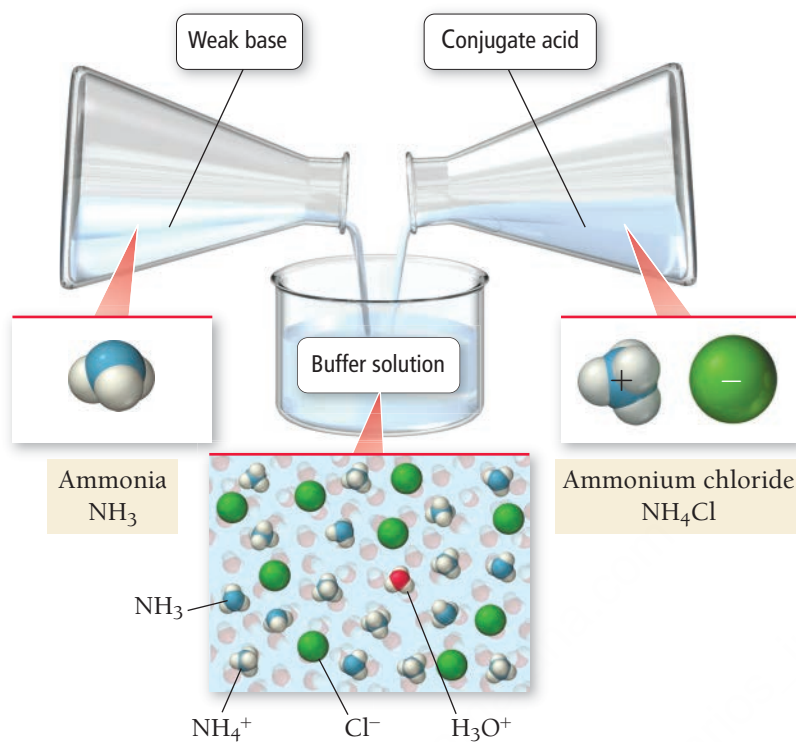
- (a) 4.15
- (b) 5.15
- (c) 5.35
- (d) 6.35

Buffers Containing a Base and Its Conjugate Acid

So far, we have seen examples of buffers composed of an acid and its conjugate base (where the conjugate base is an ion). A buffer can also be composed of a base and its conjugate acid (where the conjugate acid is an ion). For example, a solution containing significant amounts of both NH_3 and NH_4Cl acts as a buffer (**Figure 17.4**). The NH_3 is a weak base that neutralizes small amounts of added acid, and the NH_4^+ ion is the conjugate acid that neutralizes small amounts of added base.

We calculate the pH of a solution like this in the same way that we calculated the pH of a buffer containing a weak acid and its conjugate base. When using the Henderson–Hasselbalch equation, however, we must first calculate pK_a for the conjugate acid of the weak base. Recall from Section 16.9 that for a conjugate acid–base pair, $K_a \times K_b = K_w$ and $\text{pK}_a + \text{pK}_b = 14$. Consequently, we can find pK_a of the conjugate acid by subtracting pK_b of the weak base from 14. Example 17.4 illustrates the procedure for calculating the pH of a buffer composed of a weak base and its conjugate acid.

Formation of a Buffer



◀ **FIGURE 17.4 Buffer Containing a Base**
A buffer can also consist of a weak base and its conjugate acid.

EXAMPLE 17.4

Using the Henderson–Hasselbalch Equation to Calculate the pH of a Buffer Solution Composed of a Weak Base and Its Conjugate Acid

Use the Henderson–Hasselbalch equation to calculate the pH of a buffer solution that is 0.50 M in NH_3 and 0.20 M in NH_4Cl . For ammonia, $\text{p}K_b = 4.75$.

SOLUTION

Since K_b for (1.8×10^{-5}) is much smaller than the initial concentrations in this problem, you can use the Henderson–Hasselbalch equation to calculate the pH of the buffer. First calculate $\text{p}K_a$ from $\text{p}K_b$.

Then substitute the given quantities into the Henderson–Hasselbalch equation and calculate pH.

$$\begin{aligned}
 \text{p}K_a + \text{p}K_b &= 14 \\
 \text{p}K_a &= 14 - \text{p}K_b \\
 &= 14 - 4.75 \\
 &= 9.25 \\
 \text{pH} &= \text{p}K_a + \log \frac{[\text{base}]}{[\text{acid}]} \\
 &= 9.25 + \log \frac{0.50}{0.20} \\
 &= 9.25 + 0.40 \\
 &= 9.65
 \end{aligned}$$

FOR PRACTICE 17.4

Calculate the pH of 1.0 L of the solution in Example 17.4 upon addition of 0.010 mol of solid NaOH to the original buffer solution.

FOR MORE PRACTICE 17.4

Calculate the pH of 1.0 L of the solution in Example 17.4 upon addition of 30.0 mL of 1.0 M HCl to the original buffer solution.

Interactive
Worked Example
Video 17.4

PEARSON
eText
2.0

17.3 Buffer Effectiveness: Buffer Range and Buffer Capacity

An effective buffer neutralizes small to moderate amounts of added acid or base. Recall from the opening section of this chapter, however, that a buffer can be destroyed by the addition of too much acid or too much base. Which factors influence the effectiveness of a buffer? In this section, we examine two such factors: *the relative amounts of the acid and conjugate base* and *the absolute concentrations of the acid and conjugate base*. We then define the *capacity of a buffer* (how much added acid or base it can effectively neutralize) and the *range of a buffer* (the pH range over which a particular acid and its conjugate base can be effective).

Relative Amounts of Acid and Base

A buffer is most effective (most resistant to pH changes) when the concentrations of acid and conjugate base are equal. We can explore this idea by considering the behavior of a generic buffer composed of HA and A[−] for which pK_a = 5.00. Let's calculate the percent change in pH upon addition of 0.010 mol of NaOH for two different 1.0-L solutions of this buffer system. Both solutions have 0.20 mol of *total* acid and conjugate base. However, solution I has equal amounts of acid and conjugate base (0.10 mol of each), while solution II has much more acid than conjugate base (0.18 mol HA and 0.020 mol A[−]). We can calculate the initial pH values of each solution using the Henderson–Hasselbalch equation. Solution I has an initial pH of 5.00, and solution II has an initial pH of 4.05.

Solution I: 0.10 mol HA and 0.10 mol A[−]; initial pH = 5.00

	OH [−] (aq) + HA(aq) → H ₂ O(l) + A [−] (aq)			
Before addition	≈ 0.00 mol	0.100 mol		0.100 mol
Addition	0.010 mol	—		—
After addition	≈ 0.00 mol	0.090 mol		0.110 mol

$$\begin{aligned}
 \text{pH} &= \text{p}K_a + \log \frac{[\text{base}]}{[\text{acid}]} \\
 &= 5.00 + \log \frac{0.110}{0.090} \\
 &= 5.09 \\
 \% \text{ change} &= \frac{5.09 - 5.00}{5.00} \times 100\% \\
 &= 1.8\%
 \end{aligned}$$

Solution II: 0.18 mol HA and 0.020 mol A[−]; initial pH = 4.05

	OH [−] (aq) + HA(aq) → H ₂ O(l) + A [−] (aq)			
Before addition	≈ 0.00 mol	0.18 mol		0.020 mol
Addition	0.010 mol	—		—
After addition	≈ 0.00 mol	0.17 mol		0.030 mol

$$\begin{aligned}
 \text{pH} &= \text{p}K_a + \log \frac{[\text{base}]}{[\text{acid}]} \\
 &= 5.00 + \log \frac{0.030}{0.17} \\
 &= 4.25 \\
 \% \text{ change} &= \frac{4.25 - 4.05}{4.05} \times 100\% \\
 &= 4.9\%
 \end{aligned}$$

We can see from the calculations that the buffer with equal amounts of acid and conjugate base is more resistant to pH change and is therefore the more effective buffer. A buffer becomes less effective as the difference in the relative amounts of acid and conjugate base increases. As a guideline, we say that an effective buffer must have a [base]/[acid] ratio in the range of 0.10 to 10. *In order for a buffer to be reasonably effective, the relative concentrations of acid and conjugate base should not differ by more than a factor of 10.*

Absolute Concentrations of the Acid and Conjugate Base

A buffer is most effective (most resistant to pH changes) when the concentrations of acid and conjugate base are high. Let's explore this idea by again considering a generic buffer composed of HA and A[−] and a pK_a of 5.00 and calculating the percent change in pH upon addition of 0.010 mol of NaOH to two 1.0-L solutions of this buffer system. In this case, both the acid and the base in solution I are ten times more concentrated

than the acid and base in solution II. Both solutions have equal relative amounts of acid and conjugate base and therefore have the same initial pH of 5.00.

Solution I: 0.50 mol HA and 0.50 mol A[−]; initial pH = 5.00

	$\text{OH}^-(aq) + \text{HA}(aq) \longrightarrow \text{H}_2\text{O}(l) + \text{A}^-(aq)$			
Before addition	≈ 0.00 mol	0.50 mol		0.50 mol
Addition	0.010 mol	—		—
After addition	≈ 0.00 mol	0.49 mol		0.51 mol

$$\begin{aligned}
 \text{pH} &= \text{p}K_a + \log \frac{[\text{base}]}{[\text{acid}]} \\
 &= 5.00 + \log \frac{0.51}{0.49} \\
 &= 5.02 \\
 \% \text{ change} &= \frac{5.02 - 5.00}{5.00} \times 100\% \\
 &= 0.4\%
 \end{aligned}$$

Solution II: 0.050 mol HA and 0.050 mol A[−]; initial pH = 5.00

	$\text{OH}^-(aq) + \text{HA}(aq) \longrightarrow \text{H}_2\text{O}(l) + \text{A}^-(aq)$			
Before addition	≈ 0.00 mol	0.050 mol		0.050 mol
Addition	0.010 mol	—		—
After addition	≈ 0.00 mol	0.040 mol		0.060 mol

$$\begin{aligned}
 \text{pH} &= \text{p}K_a + \log \frac{[\text{base}]}{[\text{acid}]} \\
 &= 5.00 + \log \frac{0.060}{0.040} \\
 &= 5.18 \\
 \% \text{ change} &= \frac{5.18 - 5.00}{5.00} \times 100\% \\
 &= 3.6\%
 \end{aligned}$$

As this calculation shows, the buffer with greater amounts of acid and conjugate base is more resistant to pH changes and therefore is the more effective buffer. The more dilute the buffer components, the less effective the buffer.

Buffer Range

In light of the guideline that the relative concentrations of acid and conjugate base should not differ by more than a factor of ten in order for a buffer to be reasonably effective, we can calculate the pH range over which a particular acid and its conjugate base make an effective buffer. Since the pH of a buffer is given by the Henderson–Hasselbalch equation, we can calculate the outermost points of the effective range as follows:

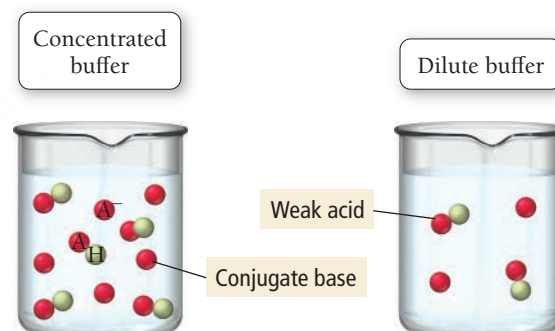
Lowest pH for effective buffer occurs when the base is one-tenth as concentrated as the acid.

$$\begin{aligned}
 \text{pH} &= \text{p}K_a + \log \frac{[\text{base}]}{[\text{acid}]} \\
 &= \text{p}K_a + \log 0.10 \\
 &= \text{p}K_a - 1
 \end{aligned}$$

Highest pH for effective buffer occurs when the base is ten times as concentrated as the acid.

$$\begin{aligned}
 \text{pH} &= \text{p}K_a + \log \frac{[\text{base}]}{[\text{acid}]} \\
 &= \text{p}K_a + \log 10 \\
 &= \text{p}K_a + 1
 \end{aligned}$$

The effective range for a buffering system is one pH unit on either side of pK_a. For example, we can use a weak acid with a pK_a of 5.0 (and its conjugate base) to prepare a buffer in the range of 4.0–6.0. We can adjust the relative amounts of acid and conjugate base to achieve any pH within this range. As we noted earlier, however, the buffer is most effective at pH 5.0 because the buffer components are exactly equal at that pH. Example 17.5 demonstrates how to pick an acid/conjugate base system for a buffer and how to calculate the relative amounts of acid and conjugate base required for a desired pH.



▲ A concentrated buffer contains more of the weak acid and its conjugate base than a weak buffer does. It can therefore neutralize more added acid or added base.

EXAMPLE 17.5**Preparing a Buffer**

Which acid would you choose to combine with its sodium salt to make a solution buffered at pH 4.25? For the best choice, calculate the ratio of the conjugate base to the acid required to attain the desired pH.

chlorous acid (HClO_2)	$\text{p}K_a = 1.95$	formic acid (HCHO_2)	$\text{p}K_a = 3.74$
nitrous acid (HNO_2)	$\text{p}K_a = 3.34$	hypochlorous acid (HClO)	$\text{p}K_a = 7.54$

SOLUTION

The best choice is formic acid because its $\text{p}K_a$ lies closest to the desired pH. You can calculate the required ratio of conjugate base (CHO_2^-) to acid (HCHO_2) by using the Henderson–Hasselbalch equation as follows:


$$\begin{aligned}\text{pH} &= \text{p}K_a + \log \frac{[\text{base}]}{[\text{acid}]} \\ 4.25 &= 3.74 + \log \frac{[\text{base}]}{[\text{acid}]} \\ \log \frac{[\text{base}]}{[\text{acid}]} &= 4.25 - 3.74 \\ &= 0.51 \\ \frac{[\text{base}]}{[\text{acid}]} &= 10^{0.51} \\ &= 3.24\end{aligned}$$

FOR PRACTICE 17.5

Which acid in Example 17.5 would you choose to create a buffer with $\text{pH} = 7.35$? If you have 500.0 mL of a 0.10 M solution of the acid, what mass of the corresponding sodium salt of the conjugate base do you need to make the buffer?

Buffer Capacity

Buffer capacity is the amount of acid or base that we can add to a buffer without causing a large change in pH. Given what we just learned about the absolute concentrations of acid and conjugate base in an effective buffer, we can conclude that the *buffer capacity increases with increasing absolute concentrations of the buffer components*. The more concentrated the weak acid and conjugate base that compose the buffer, the higher the buffer capacity. In addition, *overall buffer capacity increases as the relative concentrations of the buffer components become more similar to each other*. As the ratio of the buffer components gets closer to 1, the overall capacity of the buffer (the ability to neutralize added acid *and* added base) becomes greater. In some cases, however, a buffer that must neutralize primarily added acid (or primarily added base) can be overweighted in one of the buffer components.

**17.5**
CcConceptual
Connection**Buffer Capacity**

A 1.0-L buffer solution is 0.10 M in HF and 0.050 M in NaF. Which action destroys the buffer?

- (a) adding 0.050 mol of HCl
- (b) adding 0.050 mol of NaOH
- (c) adding 0.050 mol of NaF
- (d) none of the above

17.4 Titrations and pH Curves

We first examined acid–base titrations in Section 8.7. In a typical **acid–base titration**, a basic (or acidic) solution of unknown concentration reacts with an acidic (or basic) solution of known concentration. The known solution is slowly added to the unknown one, while the pH is monitored with either a pH meter or an **indicator** (a substance whose color depends on the pH). As the acid and base combine, they neutralize each other. At the **equivalence point**—the point in the titration when the number of moles of base is stoichiometrically equal to the number of moles of acid—the titration is complete. When the equivalence point is reached, neither reactant is in excess and the number of moles of the reactants is related by the reaction stoichiometry (**Figure 17.5 ▼**).

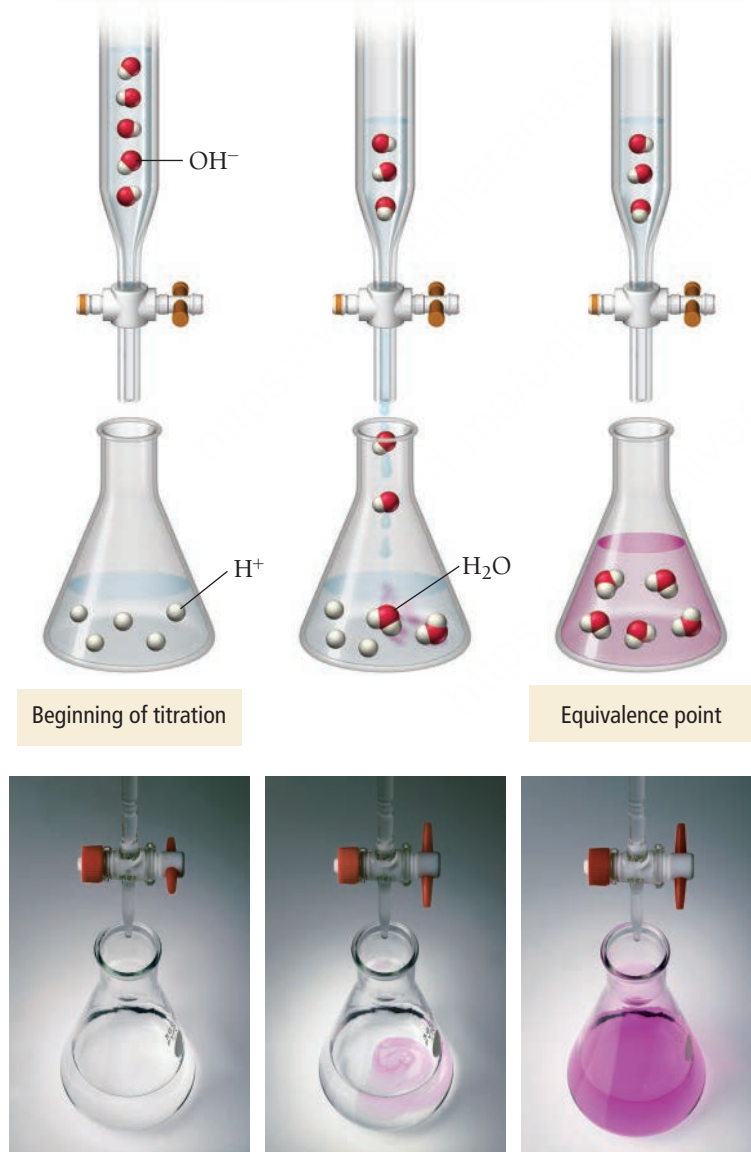
In this section, we examine acid–base titrations more closely, concentrating on the pH changes that occur during the titration. A plot of the pH of the solution during a titration is a *titration curve* or *pH curve*. **Figure 17.6 ▼** is a pH curve for the titration of HCl with NaOH. Before any base is added to the



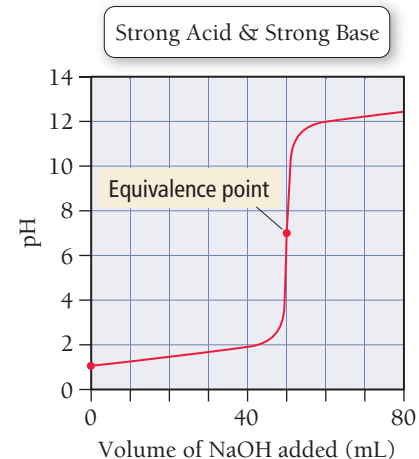
KEY CONCEPT VIDEO
The Titration of a Weak Acid and a Strong Base

The equivalence point is so named because the number of moles of acid and base are stoichiometrically equivalent at this point.

As OH^- is added in a titration, it neutralizes the H^+ , forming water. At the equivalence point, the titration is complete.



▲ FIGURE 17.5 Acid–Base Titration The solution in the flask contains the indicator phenolphthalein, which produces the color change at or near the equivalence point.



▲ FIGURE 17.6 Titration Curve: Strong Acid + Strong Base This curve represents the titration of 50.0 mL of 0.100 M HCl with 0.100 M NaOH.

solution, the pH is low (as expected for a solution of HCl). As the NaOH is added, the solution becomes less acidic because the NaOH begins to neutralize the HCl. The point of inflection in the middle of the curve is the equivalence point. Notice that the pH changes very quickly near the equivalence point (small amounts of added base cause large changes in pH). Beyond the equivalence point, the solution is basic because the HCl has been completely neutralized and excess base is being added to the solution. The exact shape of the pH curve depends on several factors, including the strength of the acid or base being titrated. Let's consider several combinations individually.

The Titration of a Strong Acid with a Strong Base

Consider the titration of 25.0 mL of 0.100 M HCl with 0.100 M NaOH. We begin by calculating the volume of base required to reach the equivalence point, and then we determine the pH at several points during the titration.

Volume of NaOH Required to Reach the Equivalence Point During the titration, the added sodium hydroxide neutralizes the hydrochloric acid:



The equivalence point is reached when the number of moles of base added equals the number of moles of acid initially in solution. We calculate the amount of acid initially in solution from its volume and its concentration:

$$\text{initial mol HCl} = 0.0250 \text{ L} \times \frac{0.100 \text{ mol}}{1 \text{ L}} = 0.00250 \text{ mol HCl}$$

The amount of NaOH that must be added is 0.00250 mol NaOH. We calculate the volume of NaOH required from its concentration:

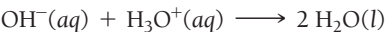
$$\text{volume NaOH solution} = 0.00250 \text{ mol} \times \frac{1 \text{ L}}{0.100 \text{ mol}} = 0.0250 \text{ L}$$

The equivalence point is reached when 25.0 mL of NaOH has been added. In this case, the concentrations of both solutions are identical, so the volume of NaOH solution required to reach the equivalence point is equal to the volume of the HCl solution that is being titrated.

Initial pH (before Adding Any Base) The initial pH of the solution is simply the pH of a 0.100 M HCl solution. Since HCl is a strong acid, the concentration of H₃O⁺ is also 0.100 M and the pH is 1.00:

$$\begin{aligned} \text{pH} &= -\log[\text{H}_3\text{O}^+] \\ &= -\log(0.100) \\ &= 1.00 \end{aligned}$$

pH after Adding 5.00 mL NaOH As NaOH is added to the solution, it neutralizes H₃O⁺:

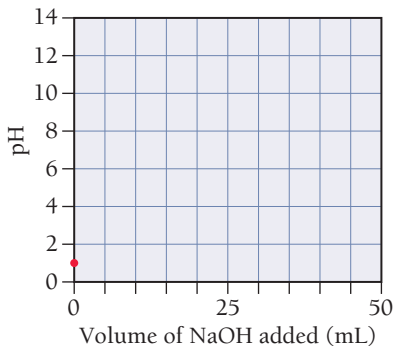


We calculate the amount of H₃O⁺ at any given point (before the equivalence point) by using the reaction stoichiometry—1 mol of NaOH neutralizes 1 mol of H₃O⁺. The initial number of moles of H₃O⁺ (as we just calculated) is 0.00250 mol. We calculate the number of moles of NaOH added at 5.00 mL by multiplying the added volume (in L) by the concentration of the NaOH solution:

$$\text{mol NaOH added} = 0.00500 \text{ L} \times \frac{0.100 \text{ mol}}{1 \text{ L}} = 0.000500 \text{ mol NaOH}$$

The addition of OH[−] causes the amount of H⁺ to decrease as shown in the following table:

	OH [−] (aq)	+	H ₃ O ⁺ (aq)	→	2 H ₂ O(l)
Before addition	≈ 0.00 mol		0.00250 mol		
Addition	0.000500 mol		—		
After addition	≈ 0.00 mol		0.00200 mol		



We calculate the H_3O^+ concentration by dividing the number of moles of H_3O^+ remaining by the *total volume* (initial volume plus added volume):

$$[\text{H}_3\text{O}^+] = \frac{0.00200 \text{ mol } \text{H}_3\text{O}^+}{0.0250 \text{ L} + 0.00500 \text{ L}} = 0.0667 \text{ M}$$

Initial volume

Added volume

The pH is therefore 1.18.

$$\begin{aligned} \text{pH} &= -\log 0.0667 \\ &= 1.18 \end{aligned}$$

pH Values after Adding 10.0, 15.0, and 20.0 mL NaOH As more NaOH is added, it further neutralizes the H_3O^+ in the solution. We calculate the pH at each of these points in the same way that we calculated the pH at the 5.00 mL point. The results are tabulated as follows:

Volume (mL)	pH
10.0	1.37
15.0	1.60
20.0	1.95

pH after Adding 25.0 mL NaOH (Equivalence Point) The pH at the equivalence point of a strong acid–strong base titration is always 7.00 (at 25 °C). At the equivalence point, the strong base has completely neutralized the strong acid. The only source of hydronium ions then is the ionization of water. The $[\text{H}_3\text{O}^+]$ at 25 °C from the ionization of water is $1.00 \times 10^{-7} \text{ M}$, and the pH is 7.00.

pH after Adding 30.00 mL NaOH As NaOH is added beyond the equivalence point, it becomes the excess reagent. We calculate the amount of OH^- at any given point (past the equivalence point) by subtracting the initial amount of H_3O^+ from the amount of OH^- added. The number of moles of OH^- added at 30.00 mL is:

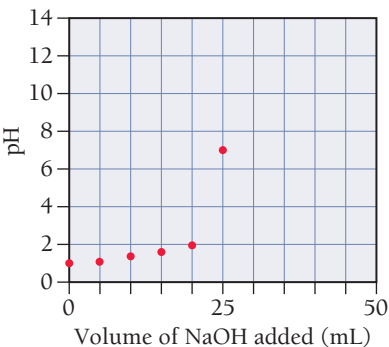
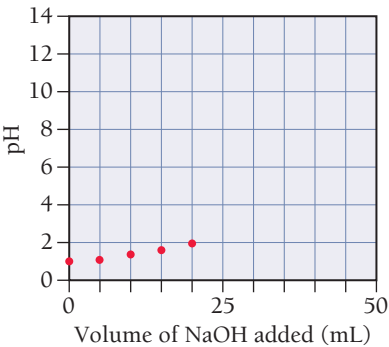
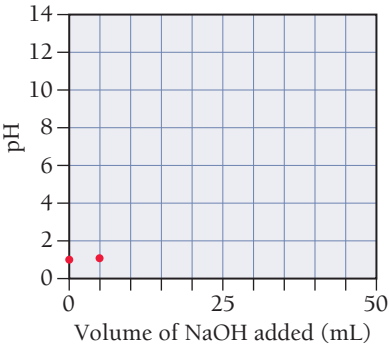
$$\text{mol } \text{OH}^- \text{ added} = 0.0300 \text{ L} \times \frac{0.100 \text{ mol}}{1 \text{ L}} = 0.00300 \text{ mol } \text{OH}^-$$

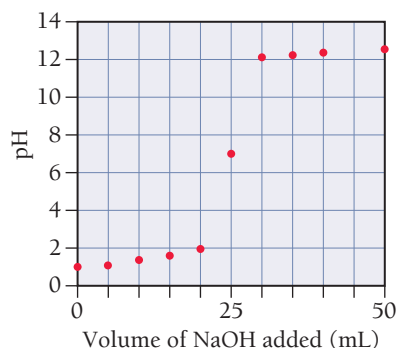
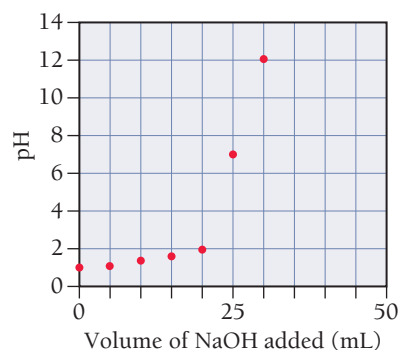
The number of moles of OH^- remaining after neutralization is shown in the following table:

	$\text{OH}^- (\text{aq})$	+	$\text{H}_3\text{O}^+ (\text{aq})$	$\longrightarrow 2 \text{H}_2\text{O} (\text{l})$
Before addition	$\approx 0.00 \text{ mol}$		0.00250 mol	
Addition	0.00300 mol		—	
After addition	0.00050 mol		0.00 mol	

We calculate the OH^- concentration by dividing the number of moles of OH^- remaining by the *total volume* (initial volume plus added volume):

$$[\text{OH}^-] = \frac{0.000500 \text{ mol } \text{OH}^-}{0.0250 \text{ L} + 0.0300 \text{ L}} = 0.00909 \text{ M}$$





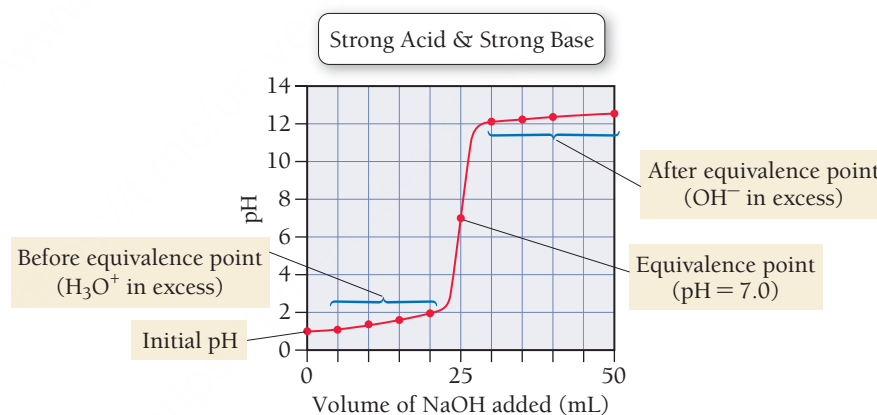
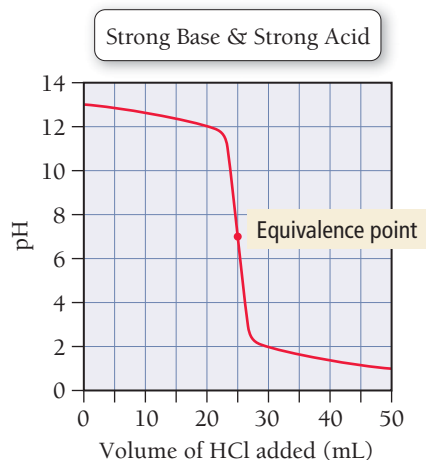
We can then calculate the $[\text{H}_3\text{O}^+]$ and pH:

$$\begin{aligned}
 [\text{H}_3\text{O}^+][\text{OH}^-] &= 10^{-14} \\
 [\text{H}_3\text{O}^+] &= \frac{10^{-14}}{[\text{OH}^-]} = \frac{10^{-14}}{0.00909} \\
 &= 1.10 \times 10^{-12} \text{ M} \\
 \text{pH} &= -\log(1.10 \times 10^{-12}) \\
 &= 11.96
 \end{aligned}$$

pH Values after Adding 35.0, 40.0, and 50.0 mL NaOH As more NaOH is added, it further increases the basicity of the solution. We calculate the pH at each of these points in the same way that we calculated the pH at the 30.00 mL point. We tabulate the results as follows:

Volume (mL)	pH
35.0	12.22
40.0	12.36
50.0	12.52

The Overall pH Curve The overall pH curve for the titration of a strong acid with a strong base has the characteristic S-shape we just plotted. The overall curve is as follows:



Summarizing the Titration of a Strong Acid with a Strong Base:

- The initial pH is the pH of the strong acid solution to be titrated.
- Before the equivalence point, H_3O^+ is in excess. Calculate the $[\text{H}_3\text{O}^+]$ by subtracting the number of moles of added OH^- from the initial number of moles of H_3O^+ and dividing by the *total* volume.
- At the equivalence point, neither reactant is in excess and the $\text{pH} = 7.00$.
- Beyond the equivalence point, OH^- is in excess. Calculate the $[\text{OH}^-]$ by subtracting the initial number of moles of H_3O^+ from the number of moles of added OH^- and dividing by the *total* volume.

▲ FIGURE 17.7 Titration Curve: Strong Base + Strong Acid This curve represents the titration of 25.0 mL of 0.100 M NaOH with 0.100 M HCl.

The pH curve for the titration of a strong base with a strong acid is shown in **Figure 17.7**. Calculating the points along this curve is very similar to calculating the points along the pH curve for the titration of a strong acid with a strong base. The primary difference is that the curve starts basic and then becomes acidic after the equivalence point (instead of vice versa).

EXAMPLE 17.6

Strong Base–Strong Acid Titration pH Curve

Interactive
Worked Example
Video 17.6

PEARSON
eText
2.0

A 50.0-mL sample of 0.200 M sodium hydroxide is titrated with 0.200 M nitric acid. Calculate the pH:

- (a) after adding 30.00 mL of HNO₃
- (b) at the equivalence point

SOLUTION

- (a) Begin by calculating the initial amount of NaOH (in moles) from the volume and molarity of the NaOH solution. Because NaOH is a strong base, it dissociates completely, so the amount of OH[−] is equal to the amount of NaOH.

moles NaOH = 0.0500 L × $\frac{0.200 \text{ mol}}{1 \text{ L}}$
= 0.0100 mol
moles OH[−] = 0.0100 mol

Calculate the amount of HNO₃ (in moles) added at 30.0 mL from the molarity of the HNO₃ solution.

moles HNO₃ added = 0.0300 L × $\frac{0.200 \text{ mol}}{1 \text{ L}}$
= 0.00600 mol HNO₃

As HNO₃ is added to the solution, it neutralizes some of the OH[−]. Calculate the number of moles of OH[−] remaining by setting up a table based on the neutralization reaction that shows the amount of OH[−] before the addition, the amount of H₃O⁺ added, and the amounts left after the addition.

	OH [−] (aq)	+ H ₃ O ⁺ (aq)	→ 2 H ₂ O(l)
Before addition	0.0100 mol	≈ 0.00 mol	
Addition	—	0.00600 mol	
After addition	0.0040 mol	0.00 mol	

Calculate the OH[−] concentration by dividing the amount of OH[−] remaining by the *total volume* (initial volume plus added volume).

[OH[−]] = $\frac{0.0040 \text{ mol}}{0.0500 \text{ L} + 0.0300 \text{ L}}$
= 0.0500 M

Calculate the pOH from [OH[−]].

pOH = −log(0.0500)
= 1.30

Calculate the pH from the pOH using the equation pH + pOH = 14.

pH = 14 − pOH
= 14 − 1.30
= 12.70

- (b) At the equivalence point, the strong base has completely neutralized the strong acid. The [H₃O⁺] at 25 °C from the ionization of water is 1.00 × 10^{−7} M and the pH is therefore 7.00.

pH = 7.00

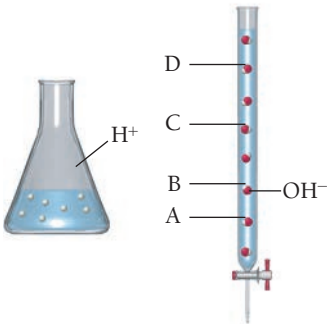
FOR PRACTICE 17.6

Calculate the pH in the titration in Example 17.6 after the addition of 60.0 mL of 0.200 M HNO₃.

Titration Equivalence Point

You want to titrate the acid shown in the flask with a strong base. Which mark on the burette next to the flask indicates the amount of base you need to add to reach the equivalence point?

- (a) A
- (b) B
- (c) C
- (d) D



17.6

Cc

Conceptual
Connection

PEARSON
eText
2.0

The Titration of a Weak Acid with a Strong Base

Let's consider the titration of 25.0 mL of 0.100 M HCHO_2 with 0.100 M NaOH :



The concentrations and the volumes here are identical to those in our previous titration, in which we calculated the pH curve for the titration of a *strong* acid with a strong base. The only difference is that HCHO_2 is a *weak* acid rather than a strong one. We begin by calculating the volume required to reach the equivalence point of the titration.

Volume of NaOH Required to Reach the Equivalence Point From the stoichiometry of the equation, we can see that the equivalence point occurs when the amount (in moles) of added base equals the amount (in moles) of acid initially in solution:


$$\text{initial mol HCHO}_2 = 0.0250 \text{ L} \times \frac{0.100 \text{ mol}}{1 \text{ L}} = 0.00250 \text{ mol HCHO}_2$$

The amount of NaOH that must be added is 0.00250 mol NaOH . The volume of NaOH required is therefore:

$$\text{volume NaOH solution} = 0.00250 \text{ mol} \times \frac{1 \text{ L}}{0.100 \text{ mol}} = 0.0250 \text{ L NaOH solution}$$

The equivalence point occurs when 25.0 mL of base has been added. Notice that the volume of NaOH required to reach the equivalence point for this weak acid is identical to that required for a strong acid. *The volume at the equivalence point in an acid–base titration does not depend on whether the acid being titrated is a strong acid or a weak acid; it depends only on the amount (in moles) of acid present in solution before the titration begins, the stoichiometry of the reaction, and the concentration of the added base.*

Initial pH (before Adding Any Base) The initial pH of the solution is the pH of a 0.100 M HCHO_2 solution. Since HCHO_2 is a weak acid, we calculate the concentration of H_3O^+ and the pH by doing an equilibrium problem for the ionization of HCHO_2 . The procedure for solving weak acid ionization problems is demonstrated in Examples 16.5 and 16.6. We show a highly condensed calculation here (K_a for HCHO_2 is 1.8×10^{-4}):



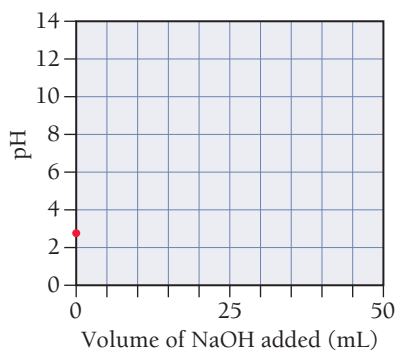
	$[\text{HCHO}_2]$	$[\text{H}_3\text{O}^+]$	$[\text{CHO}_2^-]$
Initial	0.100	≈ 0.00	0.00
Change	$-x$	$+x$	$+x$
Equil	$0.100 - x$	x	x

$$\begin{aligned} K_a &= \frac{[\text{H}_3\text{O}^+][\text{CHO}_2^-]}{[\text{HCHO}_2]} \\ &= \frac{x^2}{0.100 - x} \quad (x \text{ is small}) \\ 1.8 \times 10^{-4} &= \frac{x^2}{0.100} \\ x &= 4.24 \times 10^{-3} \end{aligned}$$

Therefore, $[\text{H}_3\text{O}^+] = 4.24 \times 10^{-3} \text{ M}$.

$$\begin{aligned} \text{pH} &= -\log(4.24 \times 10^{-3}) \\ &= 2.37 \end{aligned}$$

Notice that the pH is initially at a higher value (less acidic) than it is for a strong acid of the same concentration, as we would expect because the acid is weak.



pH after Adding 5.00 mL NaOH When we titrate a *weak acid* with a strong base, the added NaOH *converts a stoichiometric amount of the acid into its conjugate base*. As we calculated previously, 5.00 mL of the 0.100 M NaOH solution contains 0.000500 mol OH[−]. When the 0.000500 mol of OH[−] is added to the weak acid solution, the OH[−] reacts stoichiometrically with HCHO₂ causing the amount of HCHO₂ to *decrease* by 0.000500 mol and the amount of CHO₂[−] to *increase* by 0.000500 mol. This is very similar to what happens when we add strong base to a buffer, and it is summarized in the following table:

	OH [−] (aq)	+	HCHO ₂ (aq)	→	H ₂ O(l)	+	CHO ₂ [−] (aq)
Before addition	≈ 0.00 mol		0.00250 mol		—		0.00 mol
Addition	0.000500 mol		—		—		—
After addition	≈ 0.00 mol		0.00200 mol		—		0.000500 mol

Notice that, after the addition, the solution contains significant amounts of both an acid (HCHO₂) and its conjugate base (CHO₂[−])—*the solution is now a buffer*. To calculate the pH of a buffer (when the *x* is *small* approximation applies as it does here), we can use the Henderson–Hasselbalch equation and pK_a for HCHO₂ (which is 3.74):

$$\begin{aligned} \text{pH} &= \text{pK}_a + \log \frac{[\text{base}]}{[\text{acid}]} \\ &= 3.74 + \log \frac{0.000500}{0.00200} \\ &= 3.74 - 0.60 \\ &= 3.14 \end{aligned}$$

pH Values after Adding 10.0, 12.5, 15.0, and 20.0 mL NaOH As more NaOH is added, it converts more HCHO₂ into CHO₂[−]. We calculate the relative amounts of HCHO₂ and CHO₂[−] at each of these volumes using the reaction stoichiometry and then calculate the pH of the resulting buffer using the Henderson–Hasselbalch equation (as we did for the pH at 5.00 mL). The amounts of HCHO₂ and CHO₂[−] (after addition of the OH[−]) at each volume and the corresponding pH values are tabulated as follows:

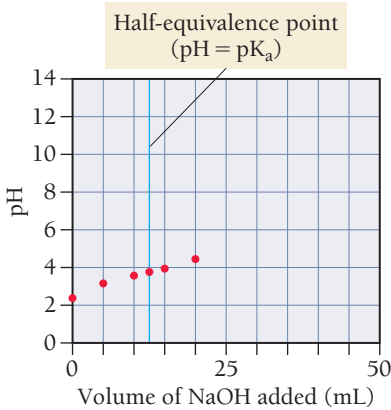
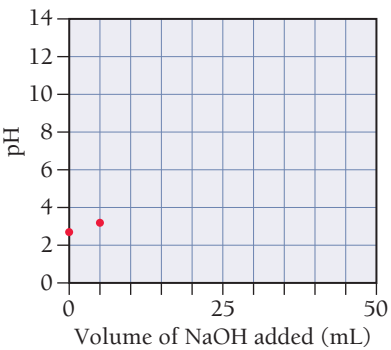
Volume (mL)	mol HCHO ₂	mol CHO ₂ [−]	pH
10.0	0.00150	0.00100	3.56
12.5	0.00125	0.00125	3.74
15.0	0.00100	0.00150	3.92
20.0	0.00050	0.00200	4.34

As the titration proceeds, more of the HCHO₂ is converted to the conjugate base (CHO₂[−]). Notice that an added NaOH volume of 12.5 mL corresponds to one-half of the equivalence point. At this volume, half of the initial amount of HCHO₂ has been converted to CHO₂[−], resulting in *equal amounts of weak acid and conjugate base*. For any buffer in which the amounts of weak acid and conjugate base are equal, pH = pK_a:

$$\text{pH} = \text{pK}_a + \log \frac{[\text{base}]}{[\text{acid}]}$$

If [base] = [acid], then [base]/[acid] = 1.

$$\begin{aligned} \text{pH} &= \text{pK}_a + \log 1 \\ &= \text{pK}_a + 0 \\ &= \text{pK}_a \end{aligned}$$




Since pH = pK_a halfway to the equivalence point, we can use titrations to determine the pK_a of an acid.

pH after Adding 25.0 mL NaOH (Equivalence Point) At the equivalence point, 0.00250 mol of OH[−] have been added, and therefore all of the HCHO₂ has been converted into its conjugate base (CHO₂[−]) as summarized in the following table:

	OH [−] (aq)	+	HCHO ₂ (aq)	→	H ₂ O (l)	+	CHO ₂ [−] (aq)
Before addition	≈ 0.00 mol		0.00250 mol		—		0.00 mol
Addition	0.00250 mol		—		—		—
After addition	≈ 0.00 mol		0.00 mol		—		0.00250 mol

The solution is no longer a buffer (it no longer contains significant amounts of both a weak acid and its conjugate base). Instead, the solution contains an ion (CHO₂[−]) acting as a weak base. We demonstrated how to calculate the pH of solutions such as this in Section 16.9 (see Example 16.14) by solving an equilibrium problem involving the ionization of water by the weak base (CHO₂[−]):



We calculate the initial concentration of CHO₂[−] for the equilibrium problem by dividing the number of moles of CHO₂[−] (0.00250 mol) by the *total* volume at the equivalence point (initial volume plus added volume):

Moles CHO₂[−] at equivalence point

$$[\text{CHO}_2^-] = \frac{0.00250 \text{ mol}}{0.0250 \text{ L} + 0.0250 \text{ L}} = 0.0500 \text{ M}$$

Initial volume Added volume at equivalence point

We then proceed to solve the equilibrium problem as shown in condensed form here:



	[CHO ₂ [−]]	[HCHO ₂]	[OH [−]]
Initial	0.0500	0.00	≈ 0.00
Change	−x	+x	+x
Equil	0.0500 − x	x	x

Before substituting into the expression for K_b, we find the value of K_b from K_a for formic acid (K_a = 1.8 × 10^{−4}) and K_w:

$$K_a \times K_b = K_w$$

$$K_b = \frac{K_w}{K_a} = \frac{1.0 \times 10^{-14}}{1.8 \times 10^{-4}} = 5.6 \times 10^{-11}$$

Then we substitute the equilibrium concentrations from the previous table into the expression for K_b:

$$K_b = \frac{[\text{HCHO}_2][\text{OH}^-]}{[\text{CHO}_2^-]}$$

$$= \frac{x^2}{0.0500 - x} \text{ (} x \text{ is small)}$$

$$5.6 \times 10^{-11} = \frac{x^2}{0.0500}$$

$$x = 1.7 \times 10^{-6}$$

Remember that x represents the concentration of the hydroxide ion. We calculate $[H_3O^+]$ and pH:

$$\begin{aligned} [OH^-] &= 1.7 \times 10^{-6} \text{ M} \\ [H_3O^+][OH^-] &= K_w = 1.0 \times 10^{-14} \\ [H_3O^+](1.7 \times 10^{-6}) &= 1.0 \times 10^{-14} \\ [H_3O^+] &= 5.9 \times 10^{-9} \text{ M} \\ \text{pH} &= -\log[H_3O^+] \\ &= -\log(5.9 \times 10^{-9}) \\ &= 8.23 \end{aligned}$$

Notice that the pH at the equivalence point is *not* neutral but basic. *The titration of a weak acid by a strong base always has a basic equivalence point* because, at the equivalence point, all of the acid has been converted into its conjugate base, resulting in a weakly basic solution.

pH after Adding 30.00 mL NaOH At this point in the titration, 0.00300 mol of OH^- have been added. NaOH has thus become the excess reagent as shown in the following table:

	$OH^-(aq)$	+	$HCHO_2(aq)$	\longrightarrow	$H_2O(l)$	+	$CHO_2^-(aq)$
Before addition	≈ 0.00 mol		0.00250 mol		—		0.00 mol
Addition	0.00300 mol		—		—		—
After addition	0.00050 mol		≈ 0.00 mol		—		0.00250 mol

The solution is now a mixture of a strong base (NaOH) and a weak base (CHO_2^-). The strong base completely overwhelms the weak base, and we can calculate the pH by considering the strong base alone (as we did for the titration of a strong acid and a strong base). We calculate the OH^- concentration by dividing the amount of OH^- remaining by the *total volume* (initial volume plus added volume):

$$[OH^-] = \frac{0.00050 \text{ mol } OH^-}{0.0250 \text{ L} + 0.0300 \text{ L}} = 0.0091 \text{ M}$$

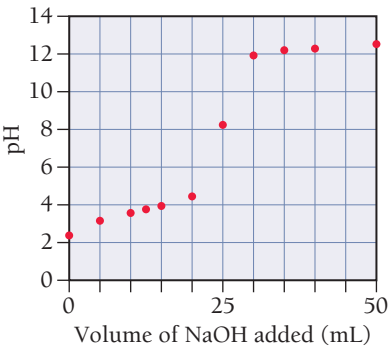
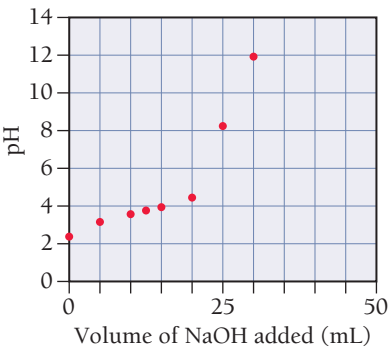
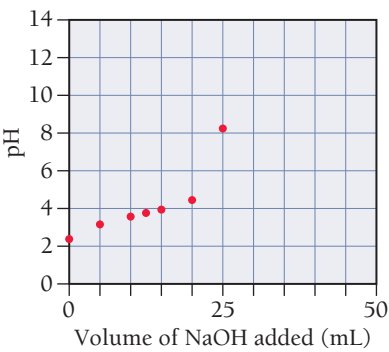
We then calculate the $[H_3O^+]$ and pH:

$$\begin{aligned} [H_3O^+][OH^-] &= 1.0 \times 10^{-14} \\ [H_3O^+] &= \frac{1.0 \times 10^{-14}}{[OH^-]} = \frac{1.0 \times 10^{-14}}{0.0091} = 1.10 \times 10^{-12} \text{ M} \\ \text{pH} &= -\log(1.10 \times 10^{-12}) \\ &= 11.96 \end{aligned}$$

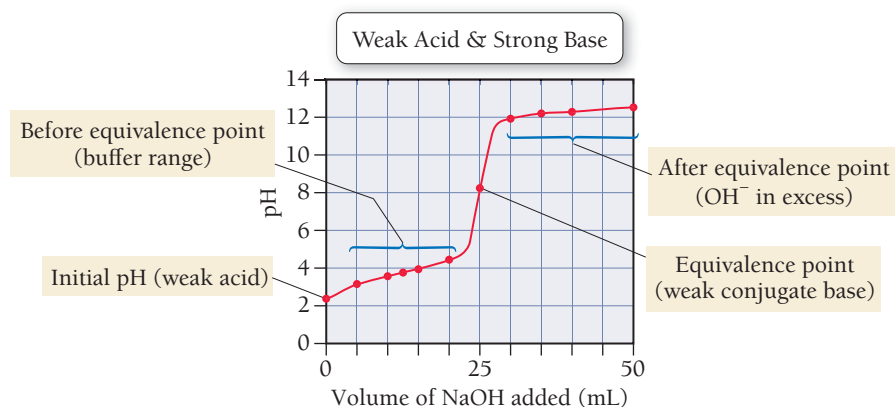
pH Values after Adding 35.0, 40.0, and 50.0 mL NaOH As more NaOH is added, the basicity of the solution increases further. We calculate the pH at each of these volumes in the same way we calculated the pH at 30.00 mL of added NaOH. The results are tabulated as follows:

Volume (mL)	pH
35.0	12.22
40.0	12.36
50.0	12.52

The Overall pH Curve The overall pH curve for the titration of a weak acid with a strong base has a characteristic S-shape similar to that for the titration of a strong acid with a strong base. The primary



difference is that the equivalence point pH is basic (not neutral). Notice that calculating the pH in different regions throughout the titration involves working different kinds of acid–base problems, all of which we have encountered before.



Summarizing Titration of a Weak Acid with a Strong Base:

- The initial pH is that of the weak acid solution to be titrated. Calculate the pH by working an equilibrium problem (similar to Examples 16.5 and 16.6) using the concentration of the weak acid as the initial concentration.
- Between the initial pH and the equivalence point, the solution becomes a buffer. Use the reaction stoichiometry to calculate the amounts of each buffer component and then use the Henderson–Hasselbalch equation to calculate the pH (as in Example 17.3).
- Halfway to the equivalence point, the buffer components are exactly equal and $\text{pH} = \text{pK}_a$.
- At the equivalence point, the acid has all been converted into its conjugate base. Calculate the pH by working an equilibrium problem for the ionization of water by the ion acting as a weak base (similar to Example 16.14). (Calculate the concentration of the ion acting as a weak base by dividing the number of moles of the ion by the total volume at the equivalence point.)
- Beyond the equivalence point, OH^- is in excess. Ignore the weak base and calculate the $[\text{OH}^-]$ by subtracting the initial number of moles of the weak acid from the number of moles of added OH^- and dividing by the *total* volume.

EXAMPLE 17.7

Weak Acid–Strong Base Titration pH Curve

A 40.0-mL sample of 0.100 M HNO_2 is titrated with 0.200 M KOH. Calculate:

- the volume required to reach the equivalence point
- the pH after adding 5.00 mL of KOH
- the pH at one-half the equivalence point

SOLUTION

- The equivalence point occurs when the amount (in moles) of added base equals the amount (in moles) of acid initially in the solution. Begin by calculating the amount (in moles) of acid initially in the solution. The amount (in moles) of KOH that must be added is equal to the amount of the weak acid.

$$\begin{aligned}\text{mol HNO}_2 &= 0.0400 \text{ L} \times \frac{0.100 \text{ mol}}{\text{L}} \\ &= 4.00 \times 10^{-3} \text{ mol} \\ \text{mol KOH required} &= 4.00 \times 10^{-3} \text{ mol}\end{aligned}$$

Interactive
Worked Example
Video 17.7

PEARSON
eText
2.0

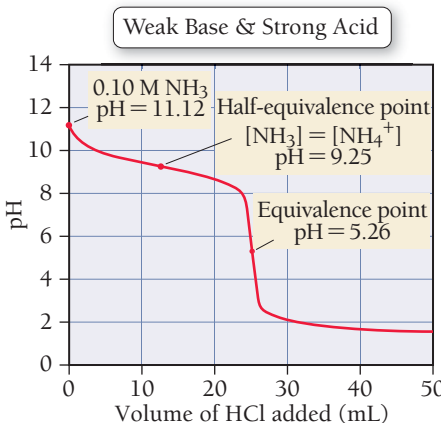
Calculate the volume of KOH required from the number of moles of KOH and the molarity.	$\begin{aligned}\text{volume KOH solution} &= 4.00 \times 10^{-3} \text{ mol} \times \frac{1 \text{ L}}{0.200 \text{ mol}} \\ &= 0.0200 \text{ L KOH solution} \\ &= 20.0 \text{ mL KOH solution}\end{aligned}$																																
<p>(b) Use the concentration of the KOH solution to calculate the amount (in moles) of OH[−] in 5.00 mL of the solution.</p> <p>Prepare a table showing the amounts of HNO₂ and NO₂[−] before and after the addition of 5.00 mL KOH. The addition of the KOH stoichiometrically reduces the concentration of HNO₂ and increases the concentration of NO₂[−].</p> <p>Since the solution now contains significant amounts of a weak acid and its conjugate base, use the Henderson–Hasselbalch equation and pK_a for HNO₂ (which is 3.34) to calculate the pH of the solution.</p>	$\begin{aligned}\text{mol OH}^- &= 5.00 \times 10^{-3} \text{ L} \times \frac{0.200 \text{ mol}}{1 \text{ L}} \\ &= 1.00 \times 10^{-3} \text{ mol OH}^-\end{aligned}$ <table><tr><th></th><th>OH[−](aq)</th><th>+</th><th>HNO₂(aq)</th><th>→</th><th>H₂O(l)</th><th>+</th><th>NO₂[−](aq)</th></tr><tr><td>Before addition</td><td>≈ 0.00 mol</td><td></td><td>4.00 × 10^{−3} mol</td><td></td><td>—</td><td></td><td>0.00 mol</td></tr><tr><td>Addition</td><td>1.00 × 10^{−3} mol</td><td></td><td>—</td><td></td><td>—</td><td></td><td>—</td></tr><tr><td>After addition</td><td>≈ 0.00 mol</td><td></td><td>3.00 × 10^{−3} mol</td><td></td><td>—</td><td></td><td>1.00 × 10^{−3} mol</td></tr></table> $\begin{aligned}\text{pH} &= \text{pK}_a + \log \frac{[\text{base}]}{[\text{acid}]} \\ &= 3.34 + \log \frac{1.00 \times 10^{-3}}{3.00 \times 10^{-3}} \\ &= 3.34 - 0.48 = 2.86\end{aligned}$		OH [−] (aq)	+	HNO ₂ (aq)	→	H ₂ O(l)	+	NO ₂ [−] (aq)	Before addition	≈ 0.00 mol		4.00 × 10 ^{−3} mol		—		0.00 mol	Addition	1.00 × 10 ^{−3} mol		—		—		—	After addition	≈ 0.00 mol		3.00 × 10 ^{−3} mol		—		1.00 × 10 ^{−3} mol
	OH [−] (aq)	+	HNO ₂ (aq)	→	H ₂ O(l)	+	NO ₂ [−] (aq)																										
Before addition	≈ 0.00 mol		4.00 × 10 ^{−3} mol		—		0.00 mol																										
Addition	1.00 × 10 ^{−3} mol		—		—		—																										
After addition	≈ 0.00 mol		3.00 × 10 ^{−3} mol		—		1.00 × 10 ^{−3} mol																										
<p>(c) At one-half the equivalence point, the amount of added base is exactly half the initial amount of acid. The base converts exactly half of the HNO₂ into NO₂[−], resulting in equal amounts of the weak acid and its conjugate base. The pH is therefore equal to pK_a.</p>	<table><tr><th></th><th>OH[−](aq)</th><th>+</th><th>HNO₂(aq)</th><th>→</th><th>H₂O(l)</th><th>+</th><th>NO₂[−](aq)</th></tr><tr><td>Before addition</td><td>≈ 0.00 mol</td><td></td><td>4.00 × 10^{−3} mol</td><td></td><td>—</td><td></td><td>0.00 mol</td></tr><tr><td>Addition</td><td>2.00 × 10^{−3} mol</td><td></td><td>—</td><td></td><td>—</td><td></td><td>—</td></tr><tr><td>After addition</td><td>≈ 0.00 mol</td><td></td><td>2.00 × 10^{−3} mol</td><td></td><td>—</td><td></td><td>2.00 × 10^{−3} mol</td></tr></table> $\begin{aligned}\text{pH} &= \text{pK}_a + \log \frac{[\text{base}]}{[\text{acid}]} \\ &= 3.34 + \log \frac{2.00 \times 10^{-3}}{2.00 \times 10^{-3}} \\ &= 3.34 + 0 = 3.34\end{aligned}$		OH [−] (aq)	+	HNO ₂ (aq)	→	H ₂ O(l)	+	NO ₂ [−] (aq)	Before addition	≈ 0.00 mol		4.00 × 10 ^{−3} mol		—		0.00 mol	Addition	2.00 × 10 ^{−3} mol		—		—		—	After addition	≈ 0.00 mol		2.00 × 10 ^{−3} mol		—		2.00 × 10 ^{−3} mol
	OH [−] (aq)	+	HNO ₂ (aq)	→	H ₂ O(l)	+	NO ₂ [−] (aq)																										
Before addition	≈ 0.00 mol		4.00 × 10 ^{−3} mol		—		0.00 mol																										
Addition	2.00 × 10 ^{−3} mol		—		—		—																										
After addition	≈ 0.00 mol		2.00 × 10 ^{−3} mol		—		2.00 × 10 ^{−3} mol																										

FOR PRACTICE 17.7
Determine the pH at the equivalence point for the titration of HNO₂ and KOH in Example 17.7.

The Titration of a Weak Base with a Strong Acid

Figure 17.8 is the pH curve for the titration of a weak base with a strong acid. Calculating the points along this curve is very similar to calculating the points along the pH curve for the titration of a weak acid with a strong base (which we just did). The primary differences are that the curve starts basic and has an acidic equivalence point. We calculate the pH in the buffer region using $\text{pH} = \text{pK}_a + \log \frac{[\text{base}]}{[\text{acid}]}$ where the pK_a corresponds to the conjugate acid of the base being titrated.

FIGURE 17.8 Titration Curve: Weak Base + Strong Acid
This curve represents the titration of 25.0 mL of 0.100 M NH₃ with 0.100 M HCl.





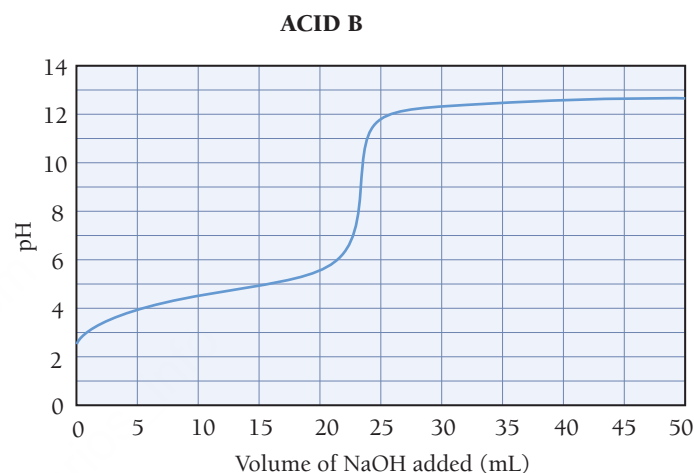
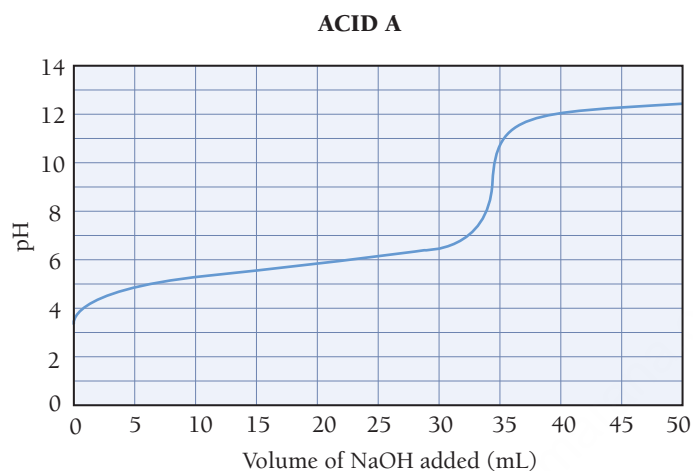
17.7

Cc

Conceptual
Connection

Weak Acid–Strong Base Titration

Two 25.0-mL samples of unknown monoprotic weak acids, A and B, are titrated with 0.100 M NaOH solutions. The titration curve for each acid is shown below. Which of the two weak acid solutions is more concentrated? Which of the two weak acids has the larger K_a ?



17.8

Cc

Conceptual
Connection

The Half-Equivalence Point

What is the pH at the half-equivalence point in the titration of a weak base with a strong acid? The pK_b of the weak base is 8.75.

- (a) 8.75 (b) 7.0 (c) 5.25 (d) 4.37

The Titration of a Polyprotic Acid

When a diprotic acid is titrated with a strong base, if K_{a1} and K_{a2} are sufficiently different, the pH curve has two equivalence points. For example, **Figure 17.9** shows the pH curve for the titration of sulfurous acid (H_2SO_3) with sodium hydroxide. Recall from Section 16.10 that sulfurous acid ionizes in two steps as follows:



The first equivalence point in the titration curve represents the titration of the first proton while the second equivalence point represents the titration of the second proton. Notice that the volume required to reach the first equivalence point is identical to the volume required to reach the second one because the number of moles of H_2SO_3 in the first step determines the number of moles of HSO_3^- in the second step.

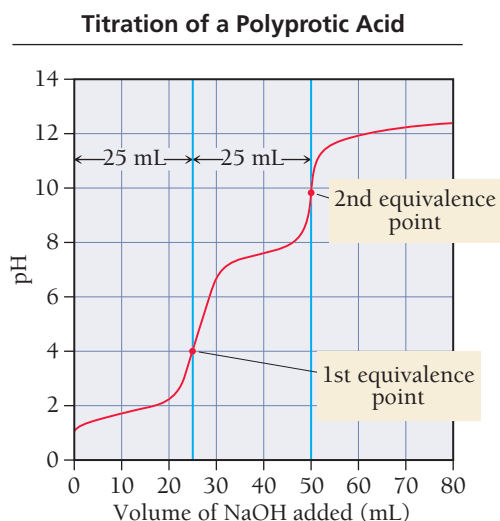


FIGURE 17.9 Titration Curve: Diprotic Acid + Strong Base

This curve represents the titration of 25.0 mL of 0.100 M H_2SO_3 with 0.100 M NaOH.

Acid–Base Titrations

17.9

Cc

Conceptual
ConnectionPEARSON
eText
2.0

Consider these three titrations:

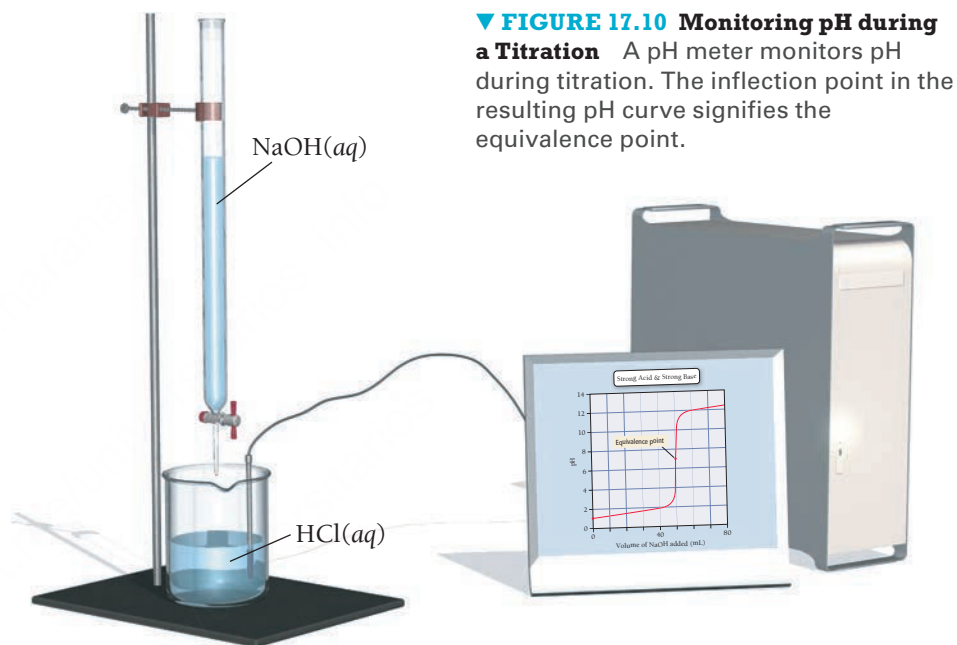
- (i) the titration of 25.0 mL of a 0.100 M monoprotic weak acid with 0.100 M NaOH
- (ii) the titration of 25.0 mL of a 0.100 M diprotic weak acid with 0.100 M NaOH
- (iii) the titration of 25.0 mL of a 0.100 M strong acid with 0.100 M NaOH

Which statement is most likely to be true?

- (a) All three titrations have the same initial pH.
- (b) All three titrations have the same pH at their first equivalence point.
- (c) All three titrations require the same volume of NaOH to reach their first equivalence point.

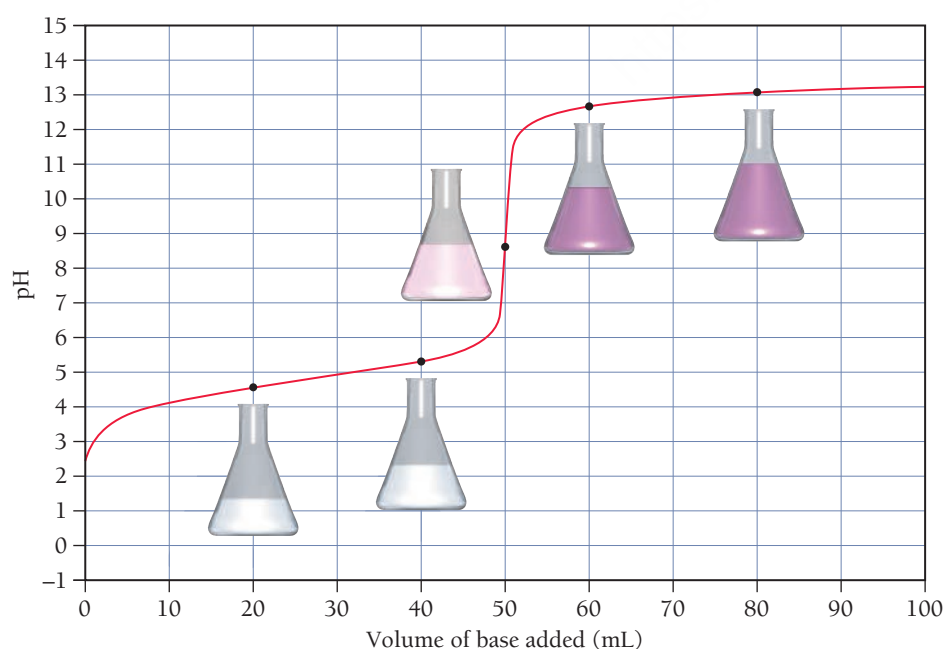
Indicators: pH-Dependent Colors

We can monitor the pH of a titration with either a pH meter or an indicator. The direct monitoring of pH with a meter yields data like the pH curves we have examined previously, allowing determination of the equivalence point from the pH curve itself, as shown in **Figure 17.10** ▶. With an indicator, we rely on the point where the indicator changes color—called the **endpoint**—to determine the equivalence point, as shown in **Figure 17.11** ▼. With the correct indicator, the endpoint of the titration (indicated by the color change) occurs at the equivalence point (when the amount of acid equals the amount of base).



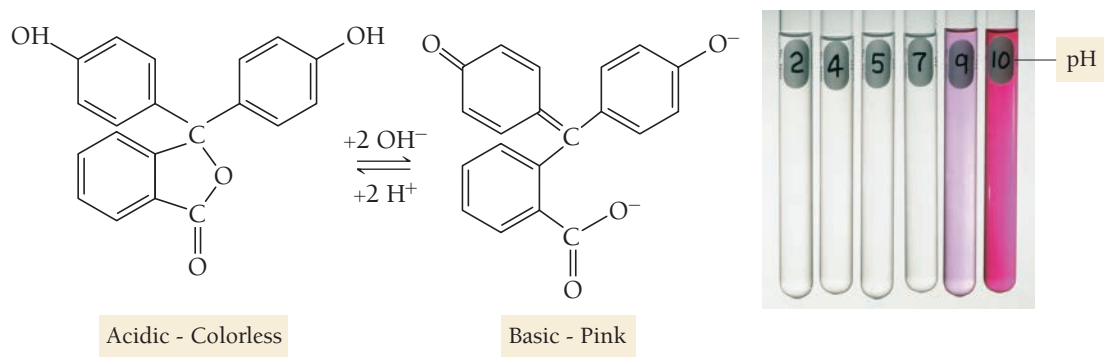
▼ **FIGURE 17.10 Monitoring pH during a Titration** A pH meter monitors pH during titration. The inflection point in the resulting pH curve signifies the equivalence point.

Using an Indicator



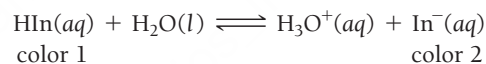
◀ **FIGURE 17.11 Monitoring Color Change during a Titration** Titration of 50.0 mL of 0.100 M $\text{HC}_2\text{H}_3\text{O}_2$ with 0.100 M NaOH. The endpoint of a titration is signaled by a color change in an appropriate indicator (in this case, phenolphthalein).

Phenolphthalein, a Common Indicator



▲ **FIGURE 17.12 Phenolphthalein** Phenolphthalein, a weakly acidic compound, is colorless. Its conjugate base is pink.

An indicator is itself a weak organic acid that is a different color than its conjugate base. For example, phenolphthalein (the structure of which is shown in **Figure 17.12** ▲) is a common indicator whose acid form is colorless and conjugate base form is pink. If we let HIn represent the acid form of a generic indicator and In^- the conjugate base form, we have the following equilibrium:



Because its color is intense, only a small amount of indicator is required—an amount that will not affect the pH of the solution or the equivalence point of the neutralization reaction. When the $[\text{H}_3\text{O}^+]$ changes during the titration, the equilibrium shifts in response. At low pH, the $[\text{H}_3\text{O}^+]$ is high and the equilibrium lies far to the left, resulting in a solution of color 1. As the titration proceeds, the $[\text{H}_3\text{O}^+]$ decreases, shifting the equilibrium to the right. Since the pH change is large near the equivalence point of the titration, there is a large change in $[\text{H}_3\text{O}^+]$ near the equivalence point. Provided that the correct indicator is chosen, there is also a correspondingly significant change in color. For the titration of a strong acid with a strong base, one drop of the base near the endpoint is usually enough to change the indicator from color 1 to color 2.

The color of a solution containing an indicator depends on the relative concentrations of HIn and In^- . As a useful guideline, we can assume the following:

- If $\frac{[\text{In}^-]}{[\text{HIn}]} = 1$, the indicator solution will be intermediate in color.
- If $\frac{[\text{In}^-]}{[\text{HIn}]} > 10$, the indicator solution will be the color of In^- .
- If $\frac{[\text{In}^-]}{[\text{HIn}]} < 0.1$, the indicator solution will be the color of HIn .

From the Henderson–Hasselbalch equation, we can derive an expression for the ratio of $[\text{In}^-]/[\text{HIn}]$:

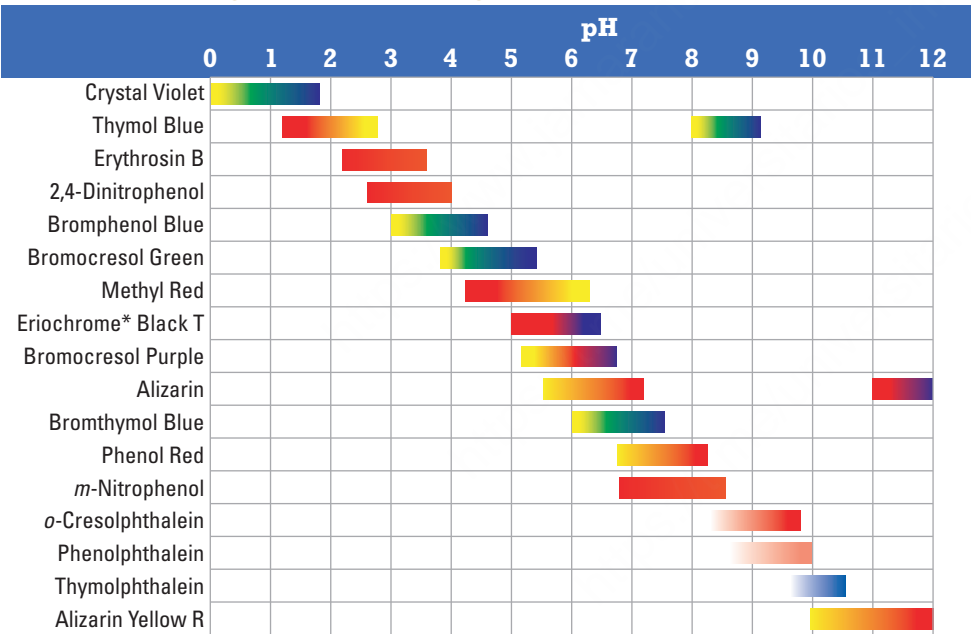
$$\begin{aligned} \text{pH} &= \text{p}K_a + \log \frac{[\text{base}]}{[\text{acid}]} \\ &= \text{p}K_a + \log \frac{[\text{In}^-]}{[\text{HIn}]} \\ \log \frac{[\text{In}^-]}{[\text{HIn}]} &= \text{pH} - \text{p}K_a \\ \frac{[\text{In}^-]}{[\text{HIn}]} &= 10^{(\text{pH} - \text{p}K_a)} \end{aligned}$$

Consider the following three pH values relative to pK_a and the corresponding colors of the indicator solution:

pH (relative to pK_a)	$[In^-]/[HIn]$ ratio	Color of Indicator Solution
$pH = pK_a$	$\frac{[In^-]}{[HIn]} = 10^0 = 1$	Intermediate Color
$pH = pK_a + 1$	$\frac{[In^-]}{[HIn]} = 10^1 = 10$	Color of In^-
$pH = pK_a - 1$	$\frac{[In^-]}{[HIn]} = 10^{-1} = 0.10$	Color of HIn

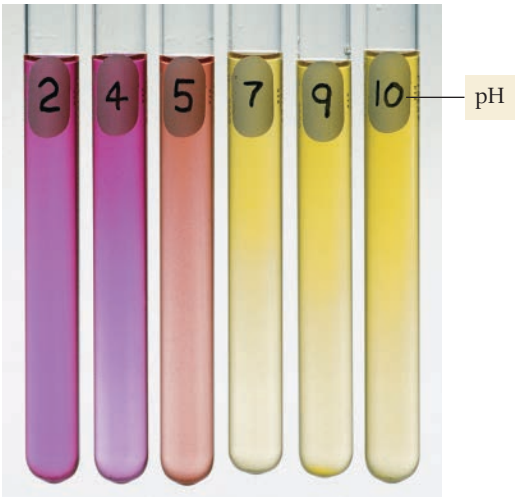
When the pH of the solution equals the pK_a of the indicator, the solution will have an intermediate color. When the pH is 1 unit (or more) above pK_a , the indicator will be the color of In^- , and when the pH is 1 unit (or more) below pK_a , the indicator will be the color of HIn . As we can see, the indicator changes color within a range of two pH units centered at pK_a (Figure 17.13 ►). Table 17.1 shows various indicators and their colors as a function of pH.

TABLE 17.1 Ranges of Color Changes for Several Acid–Base Indicators



*Trademark of CIBA GEIGY CORP.

Indicator Color Change: Methyl Red

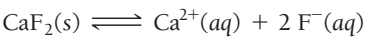


▲ FIGURE 17.13 Indicator Color Change An indicator (in this case, methyl red) generally changes color within a range of two pH units. (The pH for each solution is marked on its test tube.)

17.5 Solubility Equilibria and the Solubility-Product Constant

Recall from Chapter 8 that a compound is considered *soluble* if it dissolves in water and *insoluble* if it does not. Recall also that the *solubility rules* in Table 8.1 allow us to classify ionic compounds simply as soluble or insoluble. Now we have the tools to examine *degrees* of solubility.

We can better understand the solubility of an ionic compound by applying the concept of equilibrium to the process of dissolution. For example, we can represent the dissolution of calcium fluoride in water as an equilibrium:



The equilibrium constant for a chemical equation representing the dissolution of an ionic compound is the **solubility-product constant** (K_{sp}). For CaF_2 , the expression of the solubility-product constant is:

$$K_{sp} = [\text{Ca}^{2+}][\text{F}^-]^2$$

Notice that, as we discussed in Section 15.5, solids are omitted from the equilibrium expression because the concentration of a solid is constant (it is determined by its density and does not change when more solid is added).

The value of K_{sp} is a measure of the solubility of a compound. Table 17.2 lists the values of K_{sp} for a number of ionic compounds. Appendix IIC includes a more complete list.

TABLE 17.2 Selected Solubility-Product Constants (K_{sp}) at 25 °C

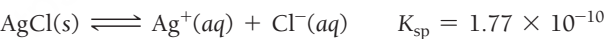
Compound	Formula	K_{sp}	Compound	Formula	K_{sp}
Barium fluoride	BaF_2	2.45×10^{-5}	Lead(II) chloride	PbCl_2	1.17×10^{-5}
Barium sulfate	BaSO_4	1.07×10^{-10}	Lead(II) bromide	PbBr_2	4.67×10^{-6}
Calcium carbonate	CaCO_3	4.96×10^{-9}	Lead(II) sulfate	PbSO_4	1.82×10^{-8}
Calcium fluoride	CaF_2	1.46×10^{-10}	Lead(II) sulfide*	PbS	9.04×10^{-29}
Calcium hydroxide	Ca(OH)_2	4.68×10^{-6}	Magnesium carbonate	MgCO_3	6.82×10^{-6}
Calcium sulfate	CaSO_4	7.10×10^{-5}	Magnesium hydroxide	Mg(OH)_2	2.06×10^{-13}
Copper(II) sulfide*	CuS	1.27×10^{-36}	Silver chloride	AgCl	1.77×10^{-10}
Iron(II) carbonate	FeCO_3	3.07×10^{-11}	Silver chromate	Ag_2CrO_4	1.12×10^{-12}
Iron(II) hydroxide	Fe(OH)_2	4.87×10^{-17}	Silver bromide	AgBr	5.36×10^{-13}
Iron(II) sulfide*	FeS	3.72×10^{-19}	Silver iodide	AgI	8.51×10^{-17}

*Sulfide equilibrium is of the type: $\text{MS(s)} + \text{H}_2\text{O(l)} \rightleftharpoons \text{M}^{2+}(\text{aq}) + \text{HS}^-(\text{aq}) + \text{OH}^-(\text{aq})$.

K_{sp} and Molar Solubility

Recall from Section 13.2 that the *solubility* of a compound is the quantity of the compound that dissolves in a certain amount of liquid. The **molar solubility** is the solubility in units of moles per liter (mol/L). We can calculate the molar solubility of a compound directly from K_{sp} .

Consider silver chloride:



Notice that K_{sp} is *not* the molar solubility but the solubility-product constant. The solubility-product constant has only one value at a given temperature. The solubility, however, can have different values in different kinds of solutions. For example, due to the common ion effect, the solubility of AgCl in pure water is different from its solubility in an NaCl solution, even though the solubility-product constant is the same for both solutions. Notice also that the solubility of AgCl is directly related (by the reaction stoichiometry) to the amount of Ag^+ or Cl^- present in solution when equilibrium is reached. Consequently, determining molar solubility from K_{sp} involves solving an equilibrium problem.

For AgCl , we set up an ICE table for the dissolution of AgCl into its ions in pure water:



	$[\text{Ag}^+]$	$[\text{Cl}^-]$
Initial	0.00	0.00
Change	+ S	+ S
Equil	S	S

We let S represent the concentration of AgCl that dissolves (which is the molar solubility) and then represent the concentrations of the ions formed in terms of S . In this case, for every 1 mol of AgCl that dissolves, 1 mol of Ag^+ and 1 mol of Cl^- are produced. Therefore, the concentrations of Ag^+ and Cl^- present in solution are equal to S . Substituting the equilibrium concentrations of Ag^+ and Cl^- into the expression for the solubility-product constant, we get:

$$\begin{aligned} K_{\text{sp}} &= [\text{Ag}^+][\text{Cl}^-] \\ &= S \times S \\ &= S^2 \end{aligned}$$

Therefore,

$$\begin{aligned} S &= \sqrt{K_{\text{sp}}} \\ &= \sqrt{1.77 \times 10^{-10}} \\ &= 1.33 \times 10^{-5} \text{ M} \end{aligned}$$

The molar solubility of AgCl is 1.33×10^{-5} mol per liter.

Alternatively, we can use the variable x in place of S , as we have in other equilibrium calculations.

EXAMPLE 17.8

Calculating Molar Solubility from K_{sp}

Interactive
Worked Example
Video 17.8

PEARSON
eText
2.0

Calculate the molar solubility of PbCl_2 in pure water.

SOLUTION

Begin by writing the reaction by which solid PbCl_2 dissolves into its constituent aqueous ions and write the corresponding expression for K_{sp} .

Refer to the stoichiometry of the reaction and prepare an ICE table, showing the equilibrium concentrations of Pb^{2+} and Cl^- relative to S , the amount of PbCl_2 that dissolves.

Substitute the equilibrium expressions for $[\text{Pb}^{2+}]$ and $[\text{Cl}^-]$ from the previous step into the expression for K_{sp} .

Solve for S and substitute the numerical value of K_{sp} (from Table 17.2) to calculate S .

$\text{PbCl}_2(\text{s}) \rightleftharpoons \text{Pb}^{2+}(\text{aq}) + 2 \text{Cl}^{-}(\text{aq})$

$K_{\text{sp}} = [\text{Pb}^{2+}][\text{Cl}^{-}]^2$

$\text{PbCl}_2(\text{s}) \rightleftharpoons \text{Pb}^{2+}(\text{aq}) + 2 \text{Cl}^{-}(\text{aq})$

	$[\text{Pb}^{2+}]$	$[\text{Cl}^{-}]$
Initial	0.00	0.00
Change	$+S$	$+2S$
Equil	S	$2S$

$K_{\text{sp}} = [\text{Pb}^{2+}][\text{Cl}^{-}]^2$

$= S(2S)^2 = 4S^3$

$S = \sqrt[3]{\frac{K_{\text{sp}}}{4}}$

$S = \sqrt[3]{\frac{1.17 \times 10^{-5}}{4}} = 1.43 \times 10^{-2} \text{ M}$

FOR PRACTICE 17.8

Calculate the molar solubility of $\text{Fe}(\text{OH})_2$ in pure water.

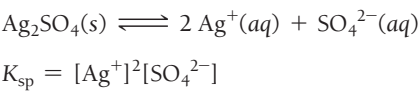
EXAMPLE 17.9

Calculating K_{sp} from Molar Solubility

The molar solubility of Ag_2SO_4 in pure water is 1.4×10^{-2} M. Calculate K_{sp} .

SOLUTION

Begin by writing the reaction by which solid Ag_2SO_4 dissolves into its constituent aqueous ions; then write the corresponding expression for K_{sp} .



Use an ICE table to define $[\text{Ag}^+]$ and $[\text{SO}_4^{2-}]$ in terms of S , the amount of Ag_2SO_4 that dissolves.

	$[\text{Ag}^+]$	$[\text{SO}_4^{2-}]$
Initial	0.00	0.00
Change	$+2S$	$+S$
Equil	$2S$	S

Substitute the expressions for $[\text{Ag}^+]$ and $[\text{SO}_4^{2-}]$ from the previous step into the expression for K_{sp} . Substitute the given value of the molar solubility for S and calculate K_{sp} .

$$\begin{aligned}
 K_{sp} &= [\text{Ag}^+]^2[\text{SO}_4^{2-}] \\
 &= (2S)^2S \\
 &= 4S^3 \\
 &= 4(1.4 \times 10^{-2})^3 \\
 &= 1.1 \times 10^{-5}
 \end{aligned}$$

FOR PRACTICE 17.9

The molar solubility of AgBr in pure water is 7.3×10^{-7} M. Calculate K_{sp} .

K_{sp} and Relative Solubility

As we have just seen, molar solubility and K_{sp} are related, and we can calculate each from the other; however, we cannot generally use the K_{sp} values of two different compounds to directly compare their relative solubilities.

For example, consider the following compounds, their K_{sp} values, and their molar solubilities:

Compound	K_{sp}	Solubility
$\text{Mg}(\text{OH})_2$	2.06×10^{-13}	3.72×10^{-5} M
FeCO_3	3.07×10^{-11}	5.54×10^{-6} M

Magnesium hydroxide has a smaller K_{sp} than iron(II) carbonate but a higher molar solubility. Why? The relationship between K_{sp} and molar solubility depends on the stoichiometry of the dissociation reaction. Consequently, we can only make a direct comparison of K_{sp} values for different compounds if the compounds have the same dissociation stoichiometry.

Consider the following compounds with the same dissociation stoichiometry, their K_{sp} values, and their molar solubilities:

Compound	K_{sp}	Solubility
$\text{Mg}(\text{OH})_2$	2.06×10^{-13}	3.72×10^{-5} M
CaF_2	1.46×10^{-10}	3.32×10^{-4} M

In this case, magnesium hydroxide and calcium fluoride have the same dissociation stoichiometry (1 mol of each compound produces 3 mol of dissolved ions); therefore, we can directly compare the K_{sp} values as a measure of relative solubility.

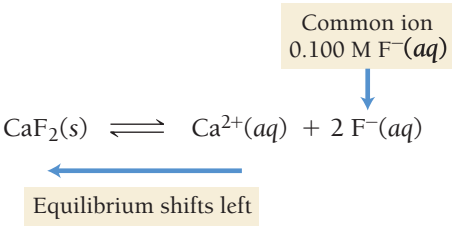
The Effect of a Common Ion on Solubility

How is the solubility of an ionic compound affected when the compound is dissolved in a solution that already contains one of its ions? For example, what is the solubility of CaF_2 in a solution that is 0.100 M in NaF? We can determine the change in solubility by considering the common ion effect, which we first encountered in Section 17.2. We represent the dissociation of CaF_2 in a 0.100 M NaF solution as shown at right.

In accordance with Le Châtelier’s principle, the presence of the F^- ion in solution causes the equilibrium to shift to the left (compared to its position in pure water), which means that less CaF_2 dissolves—that is, its solubility is decreased:

In general, the solubility of an ionic compound is lower in a solution containing a common ion than in pure water.

We can calculate the exact value of the solubility by working an equilibrium problem in which the concentration of the common ion is accounted for in the initial conditions, as shown in Example 17.10.



EXAMPLE 17.10

Calculating Molar Solubility in the Presence of a Common Ion

What is the molar solubility of CaF_2 in a solution containing 0.100 M NaF?


SOLUTION

Begin by writing the reaction by which solid CaF_2 dissolves into its constituent aqueous ions. Write the corresponding expression for K_{sp} .	$\text{CaF}_2(\text{s}) \rightleftharpoons \text{Ca}^{2+}(\text{aq}) + 2 \text{F}^{-}(\text{aq})$ $K_{\text{sp}} = [\text{Ca}^{2+}][\text{F}^{-}]^2$												
Use the stoichiometry of the reaction to prepare an ICE table showing the initial concentration of the common ion. Fill in the equilibrium concentrations of Ca^{2+} and F^{-} relative to S , the amount of CaF_2 that dissolves.	$\text{CaF}_2(\text{s}) \rightleftharpoons \text{Ca}^{2+}(\text{aq}) + 2 \text{F}^{-}(\text{aq})$ <table><tr><th></th><th>$[\text{Ca}^{2+}]$</th><th>$[\text{F}^{-}]$</th></tr><tr><td>Initial</td><td>0.00</td><td>0.100</td></tr><tr><td>Change</td><td>$+S$</td><td>$+2S$</td></tr><tr><td>Equil</td><td>S</td><td>$0.100 + 2S$</td></tr></table>		$[\text{Ca}^{2+}]$	$[\text{F}^{-}]$	Initial	0.00	0.100	Change	$+S$	$+2S$	Equil	S	$0.100 + 2S$
	$[\text{Ca}^{2+}]$	$[\text{F}^{-}]$											
Initial	0.00	0.100											
Change	$+S$	$+2S$											
Equil	S	$0.100 + 2S$											
Substitute the equilibrium expressions for $[\text{Ca}^{2+}]$ and $[\text{F}^{-}]$ from the previous step into the expression for K_{sp} . Since K_{sp} is small, you can make the approximation that $2S$ is much less than 0.100 and will therefore be insignificant when added to 0.100 (this is similar to the x is <i>small</i> approximation in equilibrium problems).	$K_{\text{sp}} = [\text{Ca}^{2+}][\text{F}^{-}]^2$ $= S(0.100 + 2S)^2 \text{ (} S \text{ is small)}$ $= S(0.100)^2$												
Solve for S and substitute the numerical value of K_{sp} (from Table 17.2) to calculate S . Note that the calculated value of S is indeed small compared to 0.100; your approximation is valid.	$K_{\text{sp}} = S(0.100)^2$ $S = \frac{K_{\text{sp}}}{0.0100} = \frac{1.46 \times 10^{-10}}{0.0100} = 1.46 \times 10^{-8} \text{ M}$												

For comparison, the molar solubility of CaF_2 in pure water is $3.32 \times 10^{-4} \text{ M}$, which means CaF_2 is over 20,000 times more soluble in water than in the NaF solution. (Confirm this for yourself by calculating its solubility in pure water from the value of K_{sp}).

FOR PRACTICE 17.10

Calculate the molar solubility of CaF_2 in a solution containing 0.250 M $\text{Ca}(\text{NO}_3)_2$.



17.10 Cc

Conceptual
Connection

Common Ion Effect

In which solution is BaSO_4 most soluble?

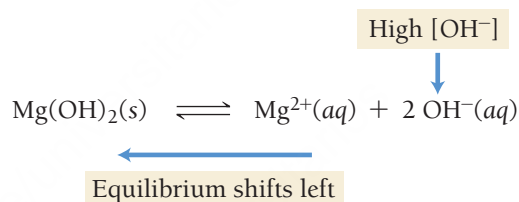
- (a) a solution that is 0.10 M in $\text{Ba}(\text{NO}_3)_2$
- (b) a solution that is 0.10 M in Na_2SO_4
- (c) a solution that is 0.10 M in NaNO_3

The Effect of pH on Solubility

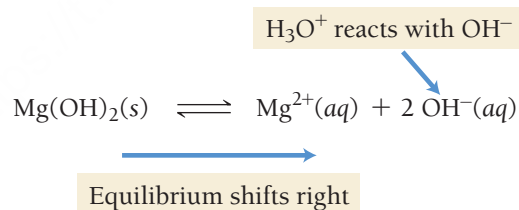
The pH of a solution can affect the solubility of a compound in that solution. For example, consider the dissociation of $\text{Mg}(\text{OH})_2$, the active ingredient in Milk of Magnesia:



The solubility of this compound is highly dependent on the pH of the solution into which it dissolves. If the pH is high, then the concentration of OH^{-} in the solution is high. In accordance with the common ion effect, this shifts the equilibrium to the left, lowering the solubility:



If the pH is low, then the concentration of $\text{H}_3\text{O}^{+}(\text{aq})$ in the solution is high. As the $\text{Mg}(\text{OH})_2$ dissolves, these H_3O^{+} ions neutralize the newly dissolved OH^{-} ions, driving the reaction to the right:



Consequently, the solubility of $\text{Mg}(\text{OH})_2$ in an acidic solution is higher than that in a pH-neutral or basic solution.

In general, the solubility of an ionic compound with a strongly basic or weakly basic anion increases with increasing acidity (decreasing pH).

Common basic anions include OH^{-} , S^{2-} , and CO_3^{2-} . Therefore, hydroxides, sulfides, and carbonates are more soluble in acidic water than in pure water. Rainwater is naturally acidic due to dissolved carbon dioxide, so it can dissolve rocks high in limestone (CaCO_3) as it flows through the ground, sometimes resulting in huge underground caverns such as those at Carlsbad Caverns National Park in New Mexico. Dripping water saturated in CaCO_3 within the cave creates the dramatic mineral formations known as stalagmites and stalactites.



▲ Stalactites (which hang from the ceiling) and stalagmites (which grow up from the ground) form as calcium carbonate precipitates out of the water evaporating in underground caves.

EXAMPLE 17.11**The Effect of pH on Solubility**

Determine whether each compound is more soluble in an acidic solution than in a neutral solution.

- (a) BaF_2 (b) AgI (c) Ca(OH)_2

SOLUTION

- (a) BaF_2 is more soluble in acidic solution because the F^- ion is a weak base. (F^- is the conjugate base of the weak acid HF and is therefore a weak base.)
- (b) The solubility of AgI is not greater in acidic solution because the I^- is *not* a base. (I^- is the conjugate base of the *strong* acid HI and is therefore pH-neutral.)
- (c) Ca(OH)_2 is more soluble in acidic solution because the OH^- ion is a strong base.

FOR PRACTICE 17.11

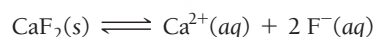
Which compound, FeCO_3 or PbBr_2 , is more soluble in acid than in base? Why?

17.6 Precipitation

In Chapter 8 we learned that a precipitation reaction can occur upon the mixing of two solutions containing ionic compounds when one of the possible cross products—the combination of a cation from one solution and the anion from the other—is insoluble. In this chapter, however, we have seen that the terms *soluble* and *insoluble* are extremes in a continuous range of solubility—many compounds are slightly soluble, and even those that we categorized as insoluble in Chapter 8 actually have some limited degree of solubility (they have very small solubility-product constants).

 Q and K_{sp}

We can better understand precipitation reactions by revisiting a concept from Chapter 15—the reaction quotient (Q). The reaction quotient for the reaction by which an ionic compound dissolves is the product of the concentrations of the ionic components raised to their stoichiometric coefficients. For example, consider the reaction by which CaF_2 dissolves:



The reaction quotient for this reaction is:


$$Q = [\text{Ca}^{2+}][\text{F}^{-}]^2$$


The difference between Q and K_{sp} is that K_{sp} is the value of this product *at equilibrium only*, whereas Q is the value of the product under any conditions. We can therefore use the value of Q to compare a solution containing any concentrations of the component ions to a solution that is at equilibrium.

Consider a solution of calcium fluoride in which Q is less than K_{sp} . Recall from Chapter 15 that if Q is less than K_{sp} , the reaction will proceed to the right (toward products). Consequently, if the solution contains any solid CaF_2 , the CaF_2 will continue to dissolve. If all of the solid has already dissolved, the solution will simply remain as it is, containing less than the equilibrium amount of the dissolved ions. Such a solution is an *unsaturated solution*. If more solid is added to an unsaturated solution, it will dissolve, as long as Q remains less than K_{sp} .

Now consider a solution in which Q is exactly equal to K_{sp} . In this case, the reaction is at equilibrium and will not make progress in either direction. Such a solution most likely contains at least a small amount of the solid in equilibrium with its component ions. However, the amount of solid may be too small to be visible. Such a solution is a *saturated solution*.

Finally, consider a solution in which Q is greater than K_{sp} . In this case, the reaction will proceed to the left (toward the reactants), and solid calcium fluoride will form from the dissolved calcium and fluoride ions. In other words, the solid normally precipitates out of a solution in which Q is greater than K_{sp} .





▲ FIGURE 17.14 Precipitation from a Supersaturated Solution
The excess solute in a supersaturated solution of sodium acetate precipitates out if a small sodium acetate crystal is added.

Under certain circumstances, however, Q can remain greater than K_{sp} for an unlimited period of time. Such a solution, called a *supersaturated solution*, is unstable and forms a precipitate when sufficiently disturbed.

Figure 17.14 ◀ shows a supersaturated solution of sodium acetate. When a small seed crystal of solid sodium acetate is dropped into the solution, it triggers the precipitation reaction.

Summarizing the Relationship of Q and K_{sp} in Solutions Containing an Ionic Compound:

- If $Q < K_{sp}$, the solution is unsaturated, and more of the solid ionic compound can dissolve in the solution.
- If $Q = K_{sp}$, the solution is saturated. The solution is holding the equilibrium amount of the dissolved ions, and additional solid does not dissolve in the solution.
- If $Q > K_{sp}$, the solution is supersaturated. Under most circumstances, the excess solid precipitates out of a supersaturated solution.

We can use Q to predict whether a precipitation reaction will occur upon the mixing of two solutions containing dissolved ionic compounds. For example, consider mixing a silver nitrate solution with a potassium iodide solution to form a mixture that is 0.010 M in AgNO_3 and 0.015 M in KI. Will a precipitate form in the newly mixed solution? From Chapter 8 we know that one of the cross products, KNO_3 , is soluble and will therefore not precipitate. The other cross product, AgI , *may* precipitate if the concentrations of Ag^+ and I^- are high enough in the newly mixed solution: We can compare Q to K_{sp} to determine whether a precipitate forms. For AgI , $K_{sp} = 8.51 \times 10^{-17}$. For the newly mixed solution, $[\text{Ag}^+] = 0.010 \text{ M}$ and $[\text{I}^-] = 0.015 \text{ M}$. We calculate Q as follows:

$$Q = [\text{Ag}^+][\text{I}^-] = (0.010)(0.015) = 1.5 \times 10^{-4}$$

The value of Q is much greater than K_{sp} ; therefore, AgI should precipitate out of the newly mixed solution.

EXAMPLE 17.12

Predicting Precipitation Reactions by Comparing Q and K_{sp}

A solution containing lead(II) nitrate is mixed with one containing sodium bromide to form a solution that is 0.0150 M in $\text{Pb}(\text{NO}_3)_2$ and 0.00350 M in NaBr. Does a precipitate form in the newly mixed solution?

SOLUTION

First, determine the possible cross products and their K_{sp} values (Table 17.2). Any cross products that are soluble will *not* precipitate (see Table 8.1).

Possible cross products:

NaNO_3 soluble

PbBr_2 $K_{sp} = 4.67 \times 10^{-6}$

Calculate Q and compare it to K_{sp} . A precipitate only forms if $Q > K_{sp}$.

$$Q = [\text{Pb}^{2+}][\text{Br}^-]^2$$

$$= (0.0150)(0.00350)^2$$

$$= 1.84 \times 10^{-7}$$

$Q < K_{sp}$; therefore, no precipitate forms.

FOR PRACTICE 17.12

If the original solutions in Example 17.12 are concentrated through evaporation and mixed again to form a solution that is 0.0600 M in $\text{Pb}(\text{NO}_3)_2$ and 0.0158 M in NaBr, does a precipitate form in the newly mixed solution?

Selective Precipitation

A solution may contain several different dissolved metal cations that we can separate by **selective precipitation**, a process involving the addition of a reagent that forms a precipitate with one of the dissolved cations but not the others. For example, seawater contains dissolved magnesium and calcium cations with the concentrations $[\text{Mg}^{2+}] = 0.059 \text{ M}$ and $[\text{Ca}^{2+}] = 0.011 \text{ M}$. We can separate these ions by adding a reagent that precipitates one of the ions but not the other. From Table 17.2, we find that $\text{Mg}(\text{OH})_2$ has a K_{sp} of 2.06×10^{-13} and that $\text{Ca}(\text{OH})_2$ has a K_{sp} of 4.68×10^{-6} , indicating that the hydroxide ion forms a precipitate with magnesium at a much lower concentration than it does with calcium. Consequently, a soluble hydroxide—such as KOH or NaOH —is a good choice for the precipitating reagent. When we add an appropriate amount of KOH or NaOH to seawater, the hydroxide ion causes the precipitation of $\text{Mg}(\text{OH})_2$ (the compound with the lowest K_{sp}) but not $\text{Ca}(\text{OH})_2$. Calculations for this selective precipitation are shown in Examples 17.13 and 17.14. In these calculations, we compare Q to K_{sp} to determine the concentration that triggers precipitation.

For selective precipitation to work, K_{sp} values must differ by at least a factor of 10^3 .

EXAMPLE 17.13

Finding the Minimum Required Reagent Concentration for Selective Precipitation

The magnesium and calcium ions present in seawater ($[\text{Mg}^{2+}] = 0.059 \text{ M}$ and $[\text{Ca}^{2+}] = 0.011 \text{ M}$) can be separated by selective precipitation with KOH . What minimum $[\text{OH}^-]$ triggers the precipitation of the Mg^{2+} ion?

SOLUTION

The precipitation commences when the value of Q for the precipitating compound just equals the value of K_{sp} . Set the expression for Q for magnesium hydroxide equal to the value of K_{sp} , and solve for $[\text{OH}^-]$. This is the concentration above which $\text{Mg}(\text{OH})_2$ precipitates.

$$\begin{aligned} Q &= [\text{Mg}^{2+}][\text{OH}^-]^2 \\ &= (0.059)[\text{OH}^-]^2 \\ \text{When } Q &= K_{\text{sp}}, \\ (0.059)[\text{OH}^-]^2 &= K_{\text{sp}} = 2.06 \times 10^{-13} \\ [\text{OH}^-]^2 &= \frac{2.06 \times 10^{-13}}{0.059} \\ [\text{OH}^-] &= 1.9 \times 10^{-6} \text{ M} \end{aligned}$$

FOR PRACTICE 17.13

If the concentration of Mg^{2+} in the solution in Example 17.13 were 0.025 M , what minimum $[\text{OH}^-]$ triggers precipitation of the Mg^{2+} ion?

EXAMPLE 17.14

Finding the Concentrations of Ions Left in Solution after Selective Precipitation

You add potassium hydroxide to the solution in Example 17.13. When the $[\text{OH}^-]$ reaches $1.9 \times 10^{-6} \text{ M}$ (as you just calculated), magnesium hydroxide begins to precipitate out of solution. As you continue to add KOH , the magnesium hydroxide continues to precipitate. At some point, the $[\text{OH}^-]$ becomes high enough to begin to precipitate the calcium ions as well. What is the concentration of Mg^{2+} when Ca^{2+} begins to precipitate?

SOLUTION

First, calculate the OH^- concentration at which Ca^{2+} begins to precipitate by writing the expression for Q for calcium hydroxide and substituting the concentration of Ca^{2+} from Example 17.13.

$$\begin{aligned} Q &= [\text{Ca}^{2+}][\text{OH}^-]^2 \\ &= (0.011)[\text{OH}^-]^2 \end{aligned}$$

—Continued on the next page

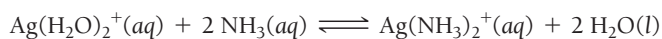
Continued from the previous page—

Set the expression for Q equal to the value of K_{sp} for calcium hydroxide and solve for $[\text{OH}^-]$. $\text{Ca}(\text{OH})_2$ precipitates above this concentration.	When $Q = K_{sp}$, $(0.011)[\text{OH}^-]^2 = K_{sp} = 4.68 \times 10^{-6}$ $[\text{OH}^-]^2 = \frac{4.68 \times 10^{-6}}{0.011}$ $[\text{OH}^-] = 2.06 \times 10^{-2} \text{ M}$
Find the concentration of Mg^{2+} when OH^- reaches the concentration you just calculated by writing the expression for Q for <i>magnesium hydroxide</i> and substituting the concentration of OH^- that you just calculated. Then set the expression for Q equal to the value of K_{sp} for magnesium hydroxide and solve for $[\text{Mg}^{2+}]$. This is the concentration of Mg^{2+} that remains when $\text{Ca}(\text{OH})_2$ begins to precipitate.	$Q = [\text{Mg}^{2+}][\text{OH}^-]^2$ $= [\text{Mg}^{2+}](2.06 \times 10^{-2})^2$ When $Q = K_{sp}$, $[\text{Mg}^{2+}](2.06 \times 10^{-2})^2 = K_{sp} = 2.06 \times 10^{-13}$ $[\text{Mg}^{2+}] = \frac{2.06 \times 10^{-13}}{(2.06 \times 10^{-2})^2}$ $[\text{Mg}^{2+}] = 4.9 \times 10^{-10} \text{ M}$
As you can see from the results, the selective precipitation worked very well. The concentration of Mg^{2+} dropped from 0.059 M to $4.9 \times 10^{-10} \text{ M}$ before any calcium began to precipitate, which means that 99.99% of the magnesium separated out of the solution.	
FOR PRACTICE 17.14 A solution is 0.085 M in Pb^{2+} and 0.025 M in Ag^+ . (a) If selective precipitation is to be achieved using NaCl , what minimum concentration of NaCl do you need to begin to precipitate the ion that precipitates first? (b) What is the concentration of each ion left in solution at the point when the second ion begins to precipitate?	

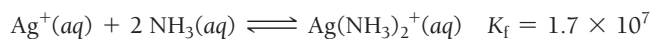
17.7 Complex Ion Equilibria

We have discussed several different types of equilibria so far, including acid–base equilibria and solubility equilibria. We now turn to equilibria of another type, which primarily involve transition metal ions in solution. Transition metal ions tend to be good electron acceptors (good Lewis acids). In aqueous solutions, water molecules can act as electron donors (Lewis bases) to hydrate transition metal ions. For example, silver ions are hydrated by water in solution to form $\text{Ag}(\text{H}_2\text{O})_2^+(aq)$. Chemists often write $\text{Ag}^+(aq)$ as a shorthand notation for the hydrated silver ion, but the bare ion does not really exist by itself in solution.

Species such as $\text{Ag}(\text{H}_2\text{O})_2^{2+}$ are known as *complex ions*. A **complex ion** contains a central metal ion bound to one or more *ligands*. A **ligand** is a neutral molecule or ion that acts as a Lewis base with the central metal ion. In $\text{Ag}(\text{H}_2\text{O})_2^+$, water is the ligand. If we put a stronger Lewis base into a solution containing $\text{Ag}(\text{H}_2\text{O})_2^+$, the stronger Lewis base displaces the water in the complex ion. For example, ammonia reacts with $\text{Ag}(\text{H}_2\text{O})_2^+$ according to the following reaction:



For simplicity, we often leave water out of the equation:



The equilibrium constant associated with the reaction for the formation of a complex ion, such as the one just shown, is the **formation constant** (K_f). We determine the expression for K_f by the law of mass action, like any equilibrium constant. For $\text{Ag}(\text{NH}_3)_2^+$, the expression for K_f is:

$$K_f = \frac{[\text{Ag}(\text{NH}_3)_2^+]}{[\text{Ag}^+][\text{NH}_3]^2}$$

We cover complex ions in more detail in Chapter 22. Here, we focus on the equilibria associated with their formation.

Notice that the value of K_f for $\text{Ag}(\text{NH}_3)_2^+$ is large, indicating that the formation of the complex ion is highly favored. Table 17.3 lists the formation constants for some common complex ions. In general, values of K_f are very large, indicating that the formation of complex ions is highly favored in each case. Example 17.15 illustrates the use K_f in calculations.

TABLE 17.3 Formation Constants of Selected Complex Ions in Water at 25 °C

Complex Ion	K_f	Complex Ion	K_f
$\text{Ag}(\text{CN})_2^-$	1×10^{21}	$\text{Cu}(\text{NH}_3)_4^{2+}$	1.7×10^{13}
$\text{Ag}(\text{NH}_3)_2^+$	1.7×10^7	$\text{Fe}(\text{CN})_6^{4-}$	1.5×10^{35}
$\text{Ag}(\text{S}_2\text{O}_3)_2^{3-}$	2.8×10^{13}	$\text{Fe}(\text{CN})_6^{3-}$	2×10^{43}
AlF_6^{3-}	7×10^{19}	$\text{Hg}(\text{CN})_4^{2-}$	1.8×10^{41}
$\text{Al}(\text{OH})_4^-$	3×10^{33}	HgCl_4^{2-}	1.1×10^{16}
CdBr_4^{2-}	5.5×10^3	HgI_4^{2-}	2×10^{30}
CdI_4^{2-}	2×10^6	$\text{Ni}(\text{NH}_3)_6^{2+}$	2.0×10^8
$\text{Cd}(\text{CN})_4^{2-}$	3×10^{18}	$\text{Pb}(\text{OH})_3^-$	8×10^{13}
$\text{Co}(\text{NH}_3)_6^{3+}$	2.3×10^{33}	$\text{Sn}(\text{OH})_3^-$	3×10^{25}
$\text{Co}(\text{OH})_4^{2-}$	5×10^9	$\text{Zn}(\text{CN})_4^{2-}$	2.1×10^{19}
$\text{Co}(\text{SCN})_4^{2-}$	1×10^3	$\text{Zn}(\text{NH}_3)_4^{2+}$	2.8×10^9
$\text{Cr}(\text{OH})_4^-$	8.0×10^{29}	$\text{Zn}(\text{OH})_4^{2-}$	2×10^{15}
$\text{Cu}(\text{CN})_4^{2-}$	1.0×10^{25}		

EXAMPLE 17.15

Complex Ion Equilibria

You mix a 200.0-mL sample of a solution that is 1.5×10^{-3} M in $\text{Cu}(\text{NO}_3)_2$ with a 250.0-mL sample of a solution that is 0.20 M in NH_3 . After the solution reaches equilibrium, what concentration of $\text{Cu}^{2+}(\text{aq})$ remains?

SOLUTION

Write the balanced equation for the complex ion equilibrium that occurs and look up the value of K_f in Table 17.3. Since this is an equilibrium problem, you have to create an ICE table, which requires the initial concentrations of Cu^{2+} and NH_3 in the combined solution. Calculate those concentrations from the given values.

$$\text{Cu}^{2+}(\text{aq}) + 4 \text{NH}_3(\text{aq}) \rightleftharpoons \text{Cu}(\text{NH}_3)_4^{2+}(\text{aq})$$
$$K_f = 1.7 \times 10^{13}$$
$$[\text{Cu}^{2+}]_{\text{initial}} = \frac{0.200 \text{ L} \times \frac{1.5 \times 10^{-3} \text{ mol}}{1 \text{ L}}}{0.200 \text{ L} + 0.250 \text{ L}} = 6.7 \times 10^{-4} \text{ M}$$
$$[\text{NH}_3]_{\text{initial}} = \frac{0.250 \text{ L} \times \frac{0.20 \text{ mol}}{1 \text{ L}}}{0.200 \text{ L} + 0.250 \text{ L}} = 0.11 \text{ M}$$

—Continued on the next page

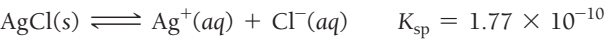
Continued from the previous page—

Construct an ICE table for the reaction and write down the initial concentrations of each species.	<div>$\text{Cu}^{2+}(\text{aq}) + 4 \text{NH}_3(\text{aq}) \rightleftharpoons \text{Cu}(\text{NH}_3)_4^{2+}(\text{aq})$<table><tr><th></th><th>$[\text{Cu}^{2+}]$</th><th>$[\text{NH}_3]$</th><th>$[\text{Cu}(\text{NH}_3)_4^{2+}]$</th></tr><tr><td>Initial</td><td>6.7×10^{-4}</td><td>0.11</td><td>0.0</td></tr><tr><td>Change</td><td></td><td></td><td></td></tr><tr><td>Equil</td><td></td><td></td><td></td></tr></table></div>		$[\text{Cu}^{2+}]$	$[\text{NH}_3]$	$[\text{Cu}(\text{NH}_3)_4^{2+}]$	Initial	6.7×10^{-4}	0.11	0.0	Change				Equil			
	$[\text{Cu}^{2+}]$	$[\text{NH}_3]$	$[\text{Cu}(\text{NH}_3)_4^{2+}]$														
Initial	6.7×10^{-4}	0.11	0.0														
Change																	
Equil																	
Since the equilibrium constant is large and the concentration of ammonia is much larger than the concentration of Cu^{2+} , you can assume that the reaction will be driven to the right so that most of the Cu^{2+} is consumed. Unlike in previous ICE tables, where you let x represent the change in concentration in going to equilibrium, here you let x represent the small amount of Cu^{2+} that remains when equilibrium is reached.	<div>$\text{Cu}^{2+}(\text{aq}) + 4 \text{NH}_3(\text{aq}) \rightleftharpoons \text{Cu}(\text{NH}_3)_4^{2+}(\text{aq})$<table><tr><th></th><th>$[\text{Cu}^{2+}]$</th><th>$[\text{NH}_3]$</th><th>$[\text{Cu}(\text{NH}_3)_4^{2+}]$</th></tr><tr><td>Initial</td><td>6.7×10^{-4}</td><td>0.11</td><td>0.0</td></tr><tr><td>Change</td><td>$\approx (-6.7 \times 10^{-4})$</td><td>$\approx 4(-6.7 \times 10^{-4})$</td><td>$\approx (+6.7 \times 10^{-4})$</td></tr><tr><td>Equil</td><td>x</td><td>0.11</td><td>6.7×10^{-4}</td></tr></table></div>		$[\text{Cu}^{2+}]$	$[\text{NH}_3]$	$[\text{Cu}(\text{NH}_3)_4^{2+}]$	Initial	6.7×10^{-4}	0.11	0.0	Change	$\approx (-6.7 \times 10^{-4})$	$\approx 4(-6.7 \times 10^{-4})$	$\approx (+6.7 \times 10^{-4})$	Equil	x	0.11	6.7×10^{-4}
	$[\text{Cu}^{2+}]$	$[\text{NH}_3]$	$[\text{Cu}(\text{NH}_3)_4^{2+}]$														
Initial	6.7×10^{-4}	0.11	0.0														
Change	$\approx (-6.7 \times 10^{-4})$	$\approx 4(-6.7 \times 10^{-4})$	$\approx (+6.7 \times 10^{-4})$														
Equil	x	0.11	6.7×10^{-4}														
Substitute the expressions for the equilibrium concentrations into the expression for K_f and solve for x .	<div>$K_f = \frac{[\text{Cu}(\text{NH}_3)_4^{2+}]}{[\text{Cu}^{2+}][\text{NH}_3]^4}$$= \frac{6.7 \times 10^{-4}}{x(0.11)^4}$$x = \frac{6.7 \times 10^{-4}}{K_f(0.11)^4}$$= \frac{6.7 \times 10^{-4}}{1.7 \times 10^{13}(0.11)^4}$$= 2.7 \times 10^{-13}$</div>																
Confirm that x is indeed small compared to the initial concentration of the metal cation. The remaining Cu^{2+} is very small because the formation constant is very large.	<div>Since $x = 2.7 \times 10^{-13} \ll 6.7 \times 10^{-4}$, the approximation is valid. The remaining $[\text{Cu}^{2+}] = 2.7 \times 10^{-13} \text{ M}$.</div>																
FOR PRACTICE 17.15 You mix a 125.0-mL sample of a solution that is 0.0117 M in NiCl_2 with a 175.0-mL sample of a solution that is 0.250 M in NH_3 . After the solution reaches equilibrium, what concentration of $\text{Ni}^{2+}(\text{aq})$ remains?																	

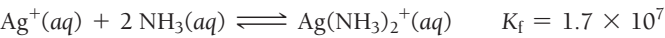
The Effect of Complex Ion Equilibria on Solubility

Recall from Section 17.5 that the solubility of an ionic compound with a basic anion increases with increasing acidity because the acid reacts with the anion and drives the reaction to the right. Similarly, *the solubility of an ionic compound containing a metal cation that forms complex ions increases in the presence of Lewis bases that form complex ions with the cation*. The most common Lewis bases that increase the solubility of metal cations are NH_3 , CN^- , and OH^- .

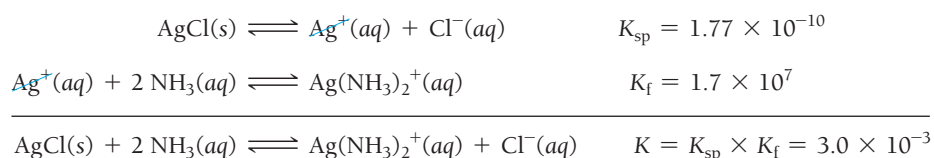
For example, silver chloride is only slightly soluble in pure water:



However, adding ammonia increases its solubility dramatically because, as we saw previously in this section, the ammonia forms a complex ion with the silver cations:

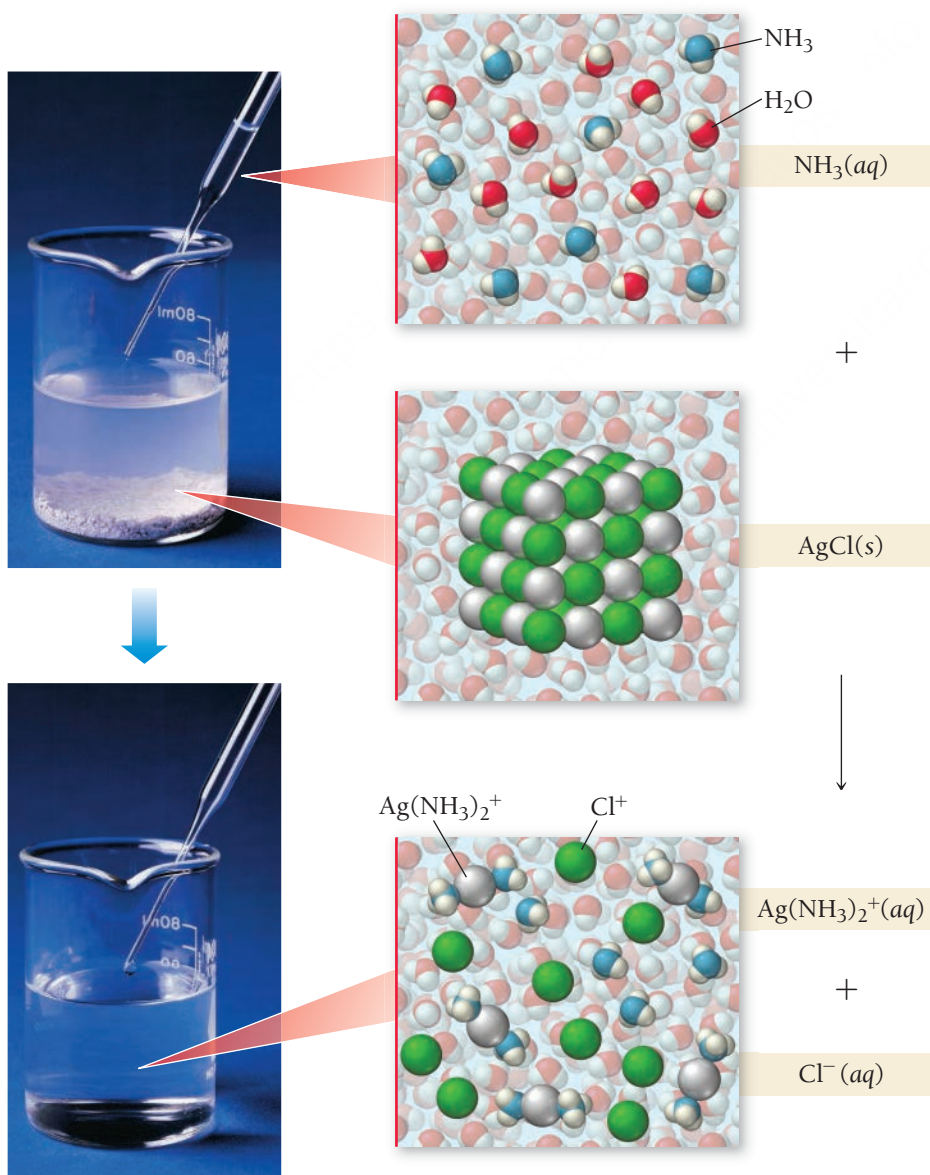
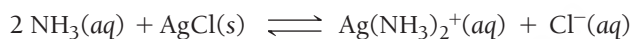


The large value of K_f significantly lowers the concentration of $\text{Ag}^+(aq)$ in solution and therefore drives the dissolution of $\text{AgCl}(s)$. The two previous reactions can be added together:



As we learned in Section 15.3, the equilibrium constant for a reaction that is the sum of two other reactions is the product of the equilibrium constants for the two other reactions. Adding ammonia changes the equilibrium constant for the dissolution of $\text{AgCl}(s)$ by a factor of $3.0 \times 10^{-3} / 1.77 \times 10^{-10} = 1.7 \times 10^7$ (17 million), which makes the otherwise relatively insoluble $\text{AgCl}(s)$ quite soluble, as shown in **Figure 17.15** ▼.

Complex Ion Formation



◀ **FIGURE 17.15 Complex Ion Formation**
Normally insoluble AgCl is made soluble by the addition of NH_3 , which forms a complex ion with Ag^+ and dissolves the AgCl .



17.11



Conceptual Connection

Solubility and Complex Ion Equilibria

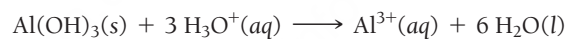
Which compound, when added to water, is most likely to increase the solubility of CuS?

- (a) NaCl
- (b) KNO₃
- (c) NaCN
- (d) MgBr₂

Recall from Section 16.3 that a substance that can act as either an acid or a base is said to be amphoteric.

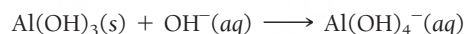
The Solubility of Amphoteric Metal Hydroxides

Many metal hydroxides are insoluble or only very slightly soluble in pH-neutral water. For example, Al(OH)₃ has $K_{sp} = 2 \times 10^{-32}$, which means that if we put Al(OH)₃ in water, the vast majority of it will settle to the bottom as an undissolved solid. All metal hydroxides, however, have a basic anion (OH[−]) and therefore become more soluble in acidic solutions (see the previous subsection and Section 17.5). The metal hydroxides become more soluble because they can act as a base and react with H₃O⁺(aq). For example, Al(OH)₃ dissolves in acid according to the reaction:



Al(OH)₃ acts as a base in this reaction.

Interestingly, some metal hydroxides can also act as acids—they are *amphoteric*. The ability of an amphoteric metal hydroxide to act as an acid increases its solubility in basic solution. For example, Al(OH)₃(s) dissolves in basic solution according to the reaction:



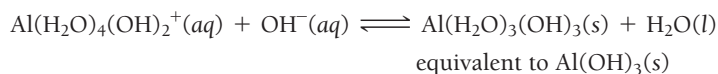
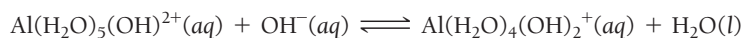
Al(OH)₃ acts as an acid in this reaction.

Al(OH)₃ is soluble at high pH and soluble at low pH but *insoluble* in a pH-neutral solution.

We can observe the whole range of the pH-dependent solubility behavior of Al³⁺ by considering a hydrated aluminum ion in solution, beginning at an acidic pH. We know from Section 16.9 that Al³⁺ in solution is inherently acidic because it complexes with water to form Al(H₂O)₆³⁺(aq). The complex ion then acts as an acid by losing a proton from one of the complexed water molecules according to the reaction:



Addition of base to the solution drives the reaction to the right and continues to remove protons from complexed water molecules:



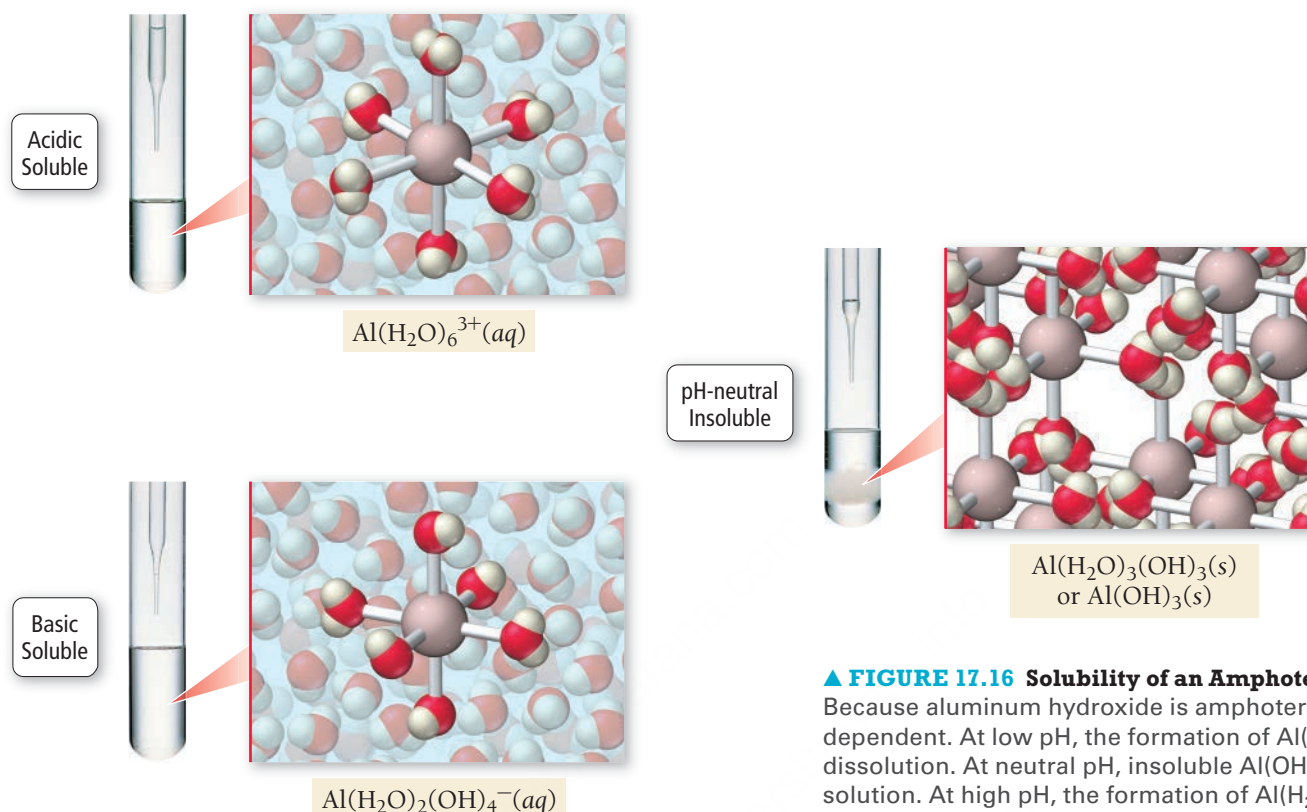
The result of removing three protons from Al(H₂O)₆³⁺ is the solid white precipitate Al(H₂O)₃(OH)₃(s), which is more commonly written as Al(OH)₃(s). The solution is now pH-neutral, and the hydroxide is insoluble. Addition of more OH[−] makes the solution basic and dissolves the solid precipitate:



As the solution goes from acidic to neutral to basic, the solubility of Al³⁺ changes accordingly, as illustrated in **Figure 17.16**.

The extent to which a metal hydroxide dissolves in both acid and base depends on the degree to which it is amphoteric. Cations that form amphoteric hydroxides include Al³⁺, Cr³⁺, Zn²⁺, Pb²⁺, and Sn²⁺. Other metal hydroxides, such as those of Ca²⁺, Fe²⁺, and Fe³⁺, are not amphoteric—they become soluble in acidic solutions but not in basic ones.

pH-Dependent Solubility of an Amphoteric Hydroxide



▲ **FIGURE 17.16 Solubility of an Amphoteric Hydroxide**

Because aluminum hydroxide is amphoteric, its solubility is pH-dependent. At low pH, the formation of $\text{Al}(\text{H}_2\text{O})_6^{3+}$ drives the dissolution. At neutral pH, insoluble $\text{Al}(\text{OH})_3$ precipitates out of solution. At high pH, the formation of $\text{Al}(\text{H}_2\text{O})_2(\text{OH})_4^{-}$ drives the dissolution.

SELF-ASSESSMENT

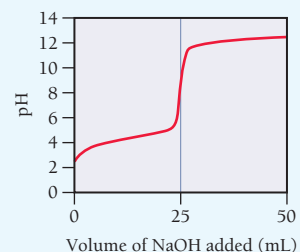
PEARSON
eText
2.0

QUIZ

- A buffer is 0.100 M in NH_4Cl and 0.100 M in NH_3 . When a small amount of hydrobromic acid is added to this buffer, which buffer component neutralizes the added acid?
 - NH_4^+
 - Cl^-
 - NH_3
 - none of the above (Hydrobromic acid will not be neutralized by this buffer.)
- What is the pH of a buffer that is 0.120 M in formic acid (HCHO_2) and 0.080 M in potassium formate (KCHO_2)? For formic acid, $K_a = 1.8 \times 10^{-4}$.
 - 2.33
 - 3.57
 - 3.74
 - 3.91
- A buffer with a pH of 9.85 contains CH_3NH_2 and $\text{CH}_3\text{NH}_3\text{Cl}$ in water. What can you conclude about the relative concentrations of CH_3NH_2 and $\text{CH}_3\text{NH}_3\text{Cl}$ in this buffer? For CH_3NH_2 , $\text{p}K_b = 3.36$.
 - $\text{CH}_3\text{NH}_2 > \text{CH}_3\text{NH}_3\text{Cl}$
 - $\text{CH}_3\text{NH}_2 < \text{CH}_3\text{NH}_3\text{Cl}$
 - $\text{CH}_3\text{NH}_2 = \text{CH}_3\text{NH}_3\text{Cl}$
 - Nothing can be concluded about the relative concentrations of CH_3NH_2 and $\text{CH}_3\text{NH}_3\text{Cl}$.
- A 500.0-mL buffer solution is 0.10 M in benzoic acid and 0.10 M in sodium benzoate and has an initial pH of 4.19. What is the pH of the buffer upon the addition of 0.010 mol of NaOH?
 - 1.70
 - 4.01
 - 4.29
 - 4.37
- Consider a buffer composed of the weak acid HA and its conjugate base A^- . Which pair of concentrations results in the most effective buffer?
 - 0.10 M HA; 0.10 M A^-
 - 0.50 M HA; 0.50 M A^-
 - 0.90 M HA; 0.10 M A^-
 - 0.10 M HA; 0.90 M A^-
- Which combination is the best choice to use to prepare a buffer with a pH of 9.0?
 - NH_3 ; NH_4Cl ($\text{p}K_b$ for NH_3 is 4.75)
 - $\text{C}_5\text{H}_5\text{N}$; $\text{C}_5\text{H}_5\text{NHCl}$ ($\text{p}K_b$ for $\text{C}_5\text{H}_5\text{N}$ is 8.76)
 - HNO_2 ; NaNO_2 ($\text{p}K_a$ for HNO_2 is 3.33)
 - HCHO_2 ; NaCHO_2 ($\text{p}K_a$ for HCHO_2 is 3.74)

7. A 25.0-mL sample of an unknown HBr solution is titrated with 0.100 M NaOH. The equivalence point is reached upon the addition of 18.88 mL of the base. What is the concentration of the HBr solution?
- 0.0755 M
 - 0.0376 M
 - 0.100 M
 - 0.00188 M
8. A 10.0-mL sample of 0.200 M hydrocyanic acid (HCN) is titrated with 0.0998 M NaOH. What is the pH at the equivalence point? For hydrocyanic acid, $pK_a = 9.31$.
- 7.00
 - 8.76
 - 9.31
 - 11.07
9. A 20.0-mL sample of 0.150 M ethylamine is titrated with 0.0981 M HCl. What is the pH after the addition of 5.0 mL of HCl? For ethylamine, $pK_b = 3.25$.
- 10.75
 - 11.04
 - 2.96
 - 11.46
10. Three 15.0-mL acid samples—0.10 M HA, 0.10 M HB, and 0.10 M H_2C —are all titrated with 0.100 M NaOH. If HA is a weak acid, HB is a strong acid, and H_2C is a diprotic acid, which statement is true of all three titrations?
- All three titrations have the same pH at the first equivalence point.
 - All three titrations have the same initial pH.
 - All three titrations have the same final pH.
 - All three titrations require the same volume of NaOH to reach the first equivalence point.

11. A weak unknown monoprotic acid is titrated with a strong base. The titration curve is shown below. What is K_a for the unknown acid?



- 2.5×10^{-3}
 - 3.2×10^{-5}
 - 3.2×10^{-7}
 - 2.5×10^{-9}
12. What is the molar solubility of lead(II) bromide ($PbBr_2$)? For lead(II) bromide, $K_{sp} = 4.67 \times 10^{-6}$.
- 0.00153 M
 - 0.0105 M
 - 0.0167 M
 - 0.0211 M
13. Calculate the molar solubility of magnesium fluoride (MgF_2) in a solution that is 0.250 M in NaF. For magnesium fluoride, $K_{sp} = 5.16 \times 10^{-11}$.
- 2.35×10^{-4} M
 - 2.06×10^{-10} M
 - 2.87×10^{-5} M
 - 8.26×10^{-10} M
14. A solution is 0.025 M in Pb^{2+} . What minimum concentration of Cl^- is required to begin to precipitate $PbCl_2$? For $PbCl_2$, $K_{sp} = 1.17 \times 10^{-5}$.
- 1.17×10^{-5} M
 - 0.0108 M
 - 0.0216 M
 - 5.41×10^{-4} M
15. Which compound is more soluble in an acidic solution than in a neutral solution?
- $PbBr_2$
 - CuCl
 - AgI
 - BaF_2

Answers: 1. c; 2. b; 3. b; 4. d; 5. b; 6. a; 7. a; 8. d; 9. d; 10. d; 11. b; 12. b; 13. d; 14. c; 15. d

CHAPTER SUMMARY 17

REVIEW

MasteringChemistry™ provides end-of-chapter exercises, feedback-enriched tutorial problems, animations, and interactive activities to encourage problem solving practice and deeper understanding of key concepts and topics.

KEY LEARNING OUTCOMES

CHAPTER OBJECTIVES	ASSESSMENT
Calculate the pH of a Buffer Solution (17.2)	<ul style="list-style-type: none"> Example 17.1 For Practice 17.1 For More Practice 17.1 Exercises 27, 28, 31, 32
Use the Henderson–Hasselbalch Equation to Calculate the pH of a Buffer Solution (17.2)	<ul style="list-style-type: none"> Example 17.2 For Practice 17.2 Exercises 35–40
Calculate the pH Change in a Buffer Solution after the Addition of a Small Amount of Strong Acid or Base (17.2)	<ul style="list-style-type: none"> Example 17.3 For Practice 17.3 For More Practice 17.3 Exercises 45–48
Use the Henderson–Hasselbalch Equation to Calculate the pH of a Buffer Solution Composed of a Weak Base and Its Conjugate Acid (17.2)	<ul style="list-style-type: none"> Example 17.4 For Practice 17.4 For More Practice 17.4 Exercises 35–40

Determine Buffer Range (17.3)	• Example 17.5 For Practice 17.5 Exercises 55–56
Determine pH Values for a Strong Acid–Strong Base Titration (17.4)	• Example 17.6 For Practice 17.6 Exercises 65–68
Determine pH Values for a Weak Acid–Strong Base Titration (17.4)	• Example 17.7 For Practice 17.7 Exercises 63–64, 69–70, 73, 75–78
Calculate Molar Solubility from K_{sp} (17.5)	• Example 17.8 For Practice 17.8 Exercises 85–86
Calculate K_{sp} from Molar Solubility (17.5)	• Example 17.9 For Practice 17.9 Exercises 87–88, 90, 92
Calculate Molar Solubility in the Presence of a Common Ion (17.5)	• Example 17.10 For Practice 17.10 Exercises 93–94
Determine the Effect of pH on Solubility (17.5)	• Example 17.11 For Practice 17.11 Exercises 95–98
Predict Precipitation Reactions by Comparing Q and K_{sp} (17.6)	• Example 17.12 For Practice 17.12 Exercises 99–102
Find the Minimum Required Reagent Concentration for Selective Precipitation (17.6)	• Example 17.13 For Practice 17.13 Exercises 103–104
Find the Concentrations of Ions Left in Solution after Selective Precipitation (17.6)	• Example 17.14 For Practice 17.14 Exercises 105–106
Work with Complex Ion Equilibria (17.7)	• Example 17.15 For Practice 17.15 Exercises 107–110

KEY TERMS

Section 17.2 buffer (740) common ion effect (742) Henderson–Hasselbalch equation (744)	Section 17.4 acid–base titration (755) indicator (755) equivalence point (755) endpoint (767)	Section 17.5 solubility-product constant (K_{sp}) (770) molar solubility (770)	Section 17.7 complex ion (778) ligand (778) formation constant (K_f) (778)
Section 17.3 buffer capacity (754)		Section 17.6 selective precipitation (777)	

KEY CONCEPTS

<p>The Dangers of Antifreeze (17.1)</p> <ul style="list-style-type: none">Although buffers closely regulate the pH of mammalian blood, the capacity of these buffers to neutralize can be overwhelmed.Ethylene glycol, the main component of antifreeze, is metabolized by the liver into glycolic acid. The resulting acidity can exceed the buffering capacity of blood and cause acidosis, a serious condition that results in oxygen deprivation.	<ul style="list-style-type: none">If the relative amounts of acid and base in a buffer differ by more than a factor of 10, the ability of the buffer to neutralize added acid and added base diminishes. The maximum pH range at which a buffer is effective is one pH unit on either side of the acid's pK_a.
<p>Buffers: Solutions That Resist pH Change (17.2)</p> <ul style="list-style-type: none">A buffer contains significant amounts of both a weak acid and its conjugate base (or a weak base and its conjugate acid), enabling the buffer to neutralize added acid or added base.Adding a small amount of acid to a buffer converts a stoichiometric amount of base to the conjugate acid. Adding a small amount of base to a buffer converts a stoichiometric amount of the acid to the conjugate base.We can determine the pH of a buffer solution by solving an equilibrium problem, focusing on the common ion effect, or using the Henderson–Hasselbalch equation.	<p>Titration and pH Curves (17.4)</p> <ul style="list-style-type: none">A titration curve is a graph of the change in pH versus the volume of acid or base that is added during a titration.This chapter examines three types of titration curves, representing three types of acid–base reactions: a strong acid with a strong base, a weak acid with a strong base (or vice versa), and a polyprotic acid with a base.The equivalence point of a titration can be made visible by an indicator, a compound that changes color over a specific pH range.
<p>Buffer Range and Buffer Capacity (17.3)</p> <ul style="list-style-type: none">A buffer works best when the amounts of acid and conjugate base it contains are large and approximately equal.	<p>Solubility Equilibria and the Solubility-Product Constant (17.5)</p> <ul style="list-style-type: none">The solubility-product constant (K_{sp}) is an equilibrium constant for the dissolution of an ionic compound in water.We can determine the molar solubility of an ionic compound from K_{sp} and vice versa. Although the value of K_{sp} is constant at a given temperature, the solubility of an ionic substance can depend on other factors such as the presence of common ions and the pH of the solution.

Precipitation (17.6)

- We can compare the magnitude of K_{sp} to the reaction quotient, Q , in order to determine the relative saturation of a solution.
- Substances with cations that have sufficiently different values of K_{sp} can be separated by selective precipitation, in which an added reagent forms a precipitate with one of the dissolved cations but not others.

Complex Ion Equilibria (17.7)

- A complex ion contains a central metal ion bound to two or more ligands.

- The equilibrium constant for the formation of a complex ion is called a formation constant and is usually quite large.
- The solubility of an ionic compound containing a metal cation that forms complex ions increases in the presence of Lewis bases that form a complex ion with the cation because the formation of the complex ion drives the dissolution reaction to the right.
- All metal hydroxides become more soluble in the presence of acids, but amphoteric metal hydroxides also become more soluble in the presence of bases.

KEY EQUATIONS AND RELATIONSHIPS**The Henderson–Hasselbalch Equation (17.2)**

$$\text{pH} = \text{p}K_a + \log \frac{[\text{base}]}{[\text{acid}]}$$

Effective Buffer Range (17.3)

$$\text{pH range} = \text{p}K_a \pm 1$$

The Relation between Q and K_{sp} (17.6)

If $Q < K_{sp}$, the solution is unsaturated. More of the solid ionic compound can dissolve in the solution.

If $Q = K_{sp}$, the solution is saturated. The solution is holding the equilibrium amount of the dissolved ions, and additional solid will not dissolve in the solution.

If $Q > K_{sp}$, the solution is supersaturated. Under most circumstances, the solid will precipitate out of a supersaturated solution.

EXERCISES**REVIEW QUESTIONS**

1. What is the pH range of human blood? How is human blood maintained in this pH range?
2. What is a buffer? How does a buffer work? How does it neutralize added acid? Added base?
3. What is the common ion effect?
4. What is the Henderson–Hasselbalch equation, and why is it useful?
5. What is the pH of a buffer when the concentrations of both buffer components (the weak acid and its conjugate base) are equal? What happens to the pH when the buffer contains more of the weak acid than the conjugate base? More of the conjugate base than the weak acid?
6. Suppose that a buffer contains equal amounts of a weak acid and its conjugate base. What happens to the relative amounts of the weak acid and conjugate base when a small amount of strong acid is added to the buffer? What happens when a small amount of strong base is added?
7. How do you use the Henderson–Hasselbalch equation to calculate the pH of a buffer containing a base and its conjugate acid? Specifically, how do you determine the correct value for $\text{p}K_a$?
8. What factors influence the effectiveness of a buffer? What are the characteristics of an effective buffer?
9. What is the effective pH range of a buffer (relative to the $\text{p}K_a$ of the weak acid component)?
10. Describe acid–base titration. What is the equivalence point?
11. The pH at the equivalence point of the titration of a strong acid with a strong base is 7.0. However, the pH at the equivalence point of the titration of a *weak* acid with a strong base is above 7.0. Explain.
12. The volume required to reach the equivalence point of an acid–base titration depends on the volume and concentration of the acid or base to be titrated and on the concentration of the acid or base used to do the titration. It does not, however, depend on the strength or weakness of the acid or base being titrated. Explain.
13. In the titration of a strong acid with a strong base, how do you calculate these quantities?
 - a. initial pH
 - b. pH before the equivalence point
 - c. pH at the equivalence point
 - d. pH beyond the equivalence point
14. In the titration of a weak acid with a strong base, how do you calculate these quantities?
 - a. initial pH
 - b. pH before the equivalence point
 - c. pH at one-half the equivalence point
 - d. pH at the equivalence point
 - e. pH beyond the equivalence point
15. The titration of a diprotic acid with sufficiently different $\text{p}K_a$'s displays two equivalence points. Why?

16. In the titration of a polyprotic acid, the volume required to reach the first equivalence point is identical to the volume required to reach the second one. Why?
17. What is the difference between the endpoint and the equivalence point in a titration?
18. What is an indicator? How can an indicator signal the equivalence point of a titration?
19. What is the solubility-product constant? Write a general expression for the solubility constant of a compound with the general formula A_mX_n .
20. What is molar solubility? How do you obtain the molar solubility of a compound from K_{sp} ?
21. How does a common ion affect the solubility of a compound? More specifically, how is the solubility of a compound with the general formula AX different in a solution containing one of the common ions (A^+ or X^-) than it is in pure water? Explain.
22. How is the solubility of an ionic compound with a basic anion affected by pH? Explain.
23. For a given solution containing an ionic compound, what is the relationship between Q , K_{sp} , and the relative saturation of the solution?
24. What is selective precipitation? Under which conditions does selective precipitation occur?

PROBLEMS BY TOPIC

Note: Answers to all odd-numbered Problems, numbered in blue, can be found in Appendix III. Exercises in the Problems by Topic section are paired, with each odd-numbered problem followed by a similar even-numbered problem. Exercises in the Cumulative Problems section are also paired but more loosely. Because of their nature, Challenge Problems and Conceptual Problems are unpaired.

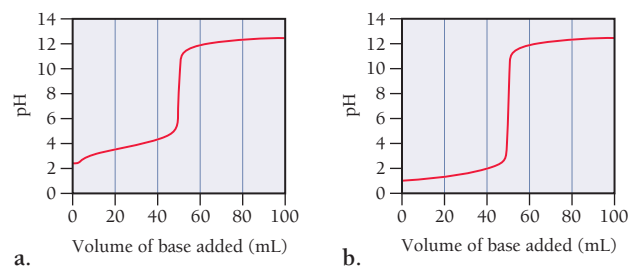
The Common Ion Effect and Buffers

25. In which of these solutions does HNO_2 ionize less than it does in pure water?
 - a. 0.10 M NaCl
 - b. 0.10 M KNO_3
 - c. 0.10 M NaOH
 - d. 0.10 M $NaNO_2$
26. A formic acid solution has a pH of 3.25. Which of these substances raises the pH of the solution upon addition? Explain your answer.
 - a. HCl
 - b. NaBr
 - c. $NaCHO_2$
 - d. KCl
27. Solve an equilibrium problem (using an ICE table) to calculate the pH of each solution.
 - a. a solution that is 0.20 M in $HCHO_2$ and 0.15 M in $NaCHO_2$
 - b. a solution that is 0.16 M in NH_3 and 0.22 M in NH_4Cl
28. Solve an equilibrium problem (using an ICE table) to calculate the pH of each solution.
 - a. a solution that is 0.195 M in $HC_2H_3O_2$ and 0.125 M in $KC_2H_3O_2$
 - b. a solution that is 0.255 M in CH_3NH_2 and 0.135 M in CH_3NH_3Br
29. Calculate the percent ionization of a 0.15 M benzoic acid solution in pure water and in a solution containing 0.10 M sodium benzoate. Why does the percent ionization differ significantly in the two solutions?
30. Calculate the percent ionization of a 0.13 M formic acid solution in pure water and also in a solution containing 0.11 M potassium formate. Explain the difference in percent ionization in the two solutions.
31. Solve an equilibrium problem (using an ICE table) to calculate the pH of each solution.
 - a. 0.15 M HF
 - b. 0.15 M NaF
 - c. a mixture that is 0.15 M in HF and 0.15 M in NaF
32. Solve an equilibrium problem (using an ICE table) to calculate the pH of each solution.
 - a. 0.18 M CH_3NH_2
 - b. 0.18 M CH_3NH_3Cl
 - c. a mixture that is 0.18 M in CH_3NH_2 and 0.18 M in CH_3NH_3Cl
33. A buffer contains significant amounts of acetic acid and sodium acetate. Write equations that demonstrate how this buffer neutralizes added acid and added base.
34. A buffer contains significant amounts of ammonia and ammonium chloride. Write equations that demonstrate how this buffer neutralizes added acid and added base.
35. Use the Henderson–Hasselbalch equation to calculate the pH of each solution in Problem 27.
36. Use the Henderson–Hasselbalch equation to calculate the pH of each solution in Problem 28.
37. Use the Henderson–Hasselbalch equation to calculate the pH of each solution.
 - a. a solution that is 0.135 M in $HClO$ and 0.155 M in $KClO$
 - b. a solution that contains 1.05% $C_2H_5NH_2$ by mass and 1.10% $C_2H_5NH_3Br$ by mass
 - c. a solution that contains 10.0 g of $HC_2H_3O_2$ and 10.0 g of $NaC_2H_3O_2$ in 150.0 mL of solution
38. Use the Henderson–Hasselbalch equation to calculate the pH of each solution.
 - a. a solution that is 0.145 M in propanoic acid and 0.115 M in potassium propanoate
 - b. a solution that contains 0.785% C_5H_5N by mass and 0.985% C_5H_5NHCl by mass
 - c. a solution that contains 15.0 g of HF and 25.0 g of NaF in 125 mL of solution
39. Calculate the pH of the solution that results from each mixture.
 - a. 50.0 mL of 0.15 M $HCHO_2$ with 75.0 mL of 0.13 M $NaCHO_2$
 - b. 125.0 mL of 0.10 M NH_3 with 250.0 mL of 0.10 M NH_4Cl
40. Calculate the pH of the solution that results from each mixture.
 - a. 150.0 mL of 0.25 M HF with 225.0 mL of 0.30 M NaF
 - b. 175.0 mL of 0.10 M $C_2H_5NH_2$ with 275.0 mL of 0.20 M $C_2H_5NH_3Cl$
41. Calculate the ratio of NaF to HF required to create a buffer with $pH = 4.00$.
42. Calculate the ratio of CH_3NH_2 to CH_3NH_3Cl concentration required to create a buffer with $pH = 10.24$.

43. What mass of sodium benzoate should you add to 150.0 mL of a 0.15 M benzoic acid solution to obtain a buffer with a pH of 4.25? (Assume no volume change.)
44. What mass of ammonium chloride should you add to 2.55 L of a 0.155 M NH_3 solution to obtain a buffer with a pH of 9.55? (Assume no volume change.)
45. A 250.0-mL buffer solution is 0.250 M in acetic acid and 0.250 M in sodium acetate.
- What is the initial pH of this solution?
 - What is the pH after addition of 0.0050 mol of HCl?
 - What is the pH after addition of 0.0050 mol of NaOH?
46. A 100.0-mL buffer solution is 0.175 M in HClO and 0.150 M in NaClO.
- What is the initial pH of this solution?
 - What is the pH after addition of 150.0 mg of HBr?
 - What is the pH after addition of 85.0 mg of NaOH?
47. For each solution, calculate the initial and final pH after the addition of 0.010 mol of HCl.
- 500.0 mL of pure water
 - 500.0 mL of a buffer solution that is 0.125 M in $\text{HC}_2\text{H}_3\text{O}_2$ and 0.115 M in $\text{NaC}_2\text{H}_3\text{O}_2$
 - 500.0 mL of a buffer solution that is 0.155 M in $\text{C}_2\text{H}_5\text{NH}_2$ and 0.145 M in $\text{C}_2\text{H}_5\text{NH}_3\text{Cl}$
48. For each solution, calculate the initial and final pH after the addition of 0.010 mol of NaOH.
- 250.0 mL of pure water
 - 250.0 mL of a buffer solution that is 0.195 M in HCHO_2 and 0.275 M in KCHO_2
 - 250.0 mL of a buffer solution that is 0.255 M in $\text{CH}_3\text{CH}_2\text{NH}_2$ and 0.235 M in $\text{CH}_3\text{CH}_2\text{NH}_3\text{Cl}$
49. A 350.0-mL buffer solution is 0.150 M in HF and 0.150 M in NaF. What mass of NaOH does this buffer neutralize before the pH rises above 4.00? If the same volume of the buffer was 0.350 M in HF and 0.350 M in NaF, what mass of NaOH is neutralized before the pH rises above 4.00?
50. A 100.0-mL buffer solution is 0.100 M in NH_3 and 0.125 M in NH_4Br . What mass of HCl does this buffer neutralize before the pH falls below 9.00? If the same volume of the buffer were 0.250 M in NH_3 and 0.400 M in NH_4Br , what mass of HCl is neutralized before the pH falls below 9.00?
51. Determine whether the mixing of each pair of solutions results in a buffer.
- 100.0 mL of 0.10 M NH_3 ; 100.0 mL of 0.15 M NH_4Cl
 - 50.0 mL of 0.10 M HCl; 35.0 mL of 0.150 M NaOH
 - 50.0 mL of 0.15 M HF; 20.0 mL of 0.15 M NaOH
 - 175.0 mL of 0.10 M NH_3 ; 150.0 mL of 0.12 M NaOH
 - 125.0 mL of 0.15 M NH_3 ; 150.0 mL of 0.20 M NaOH
52. Determine whether the mixing of each pair of solutions results in a buffer.
- 75.0 mL of 0.10 M HF; 55.0 mL of 0.15 M NaF
 - 150.0 mL of 0.10 M HF; 135.0 mL of 0.175 M HCl
 - 165.0 mL of 0.10 M HF; 135.0 mL of 0.050 M KOH
 - 125.0 mL of 0.15 M CH_3NH_2 ; 120.0 mL of 0.25 M $\text{CH}_3\text{NH}_3\text{Cl}$
 - 105.0 mL of 0.15 M CH_3NH_2 ; 95.0 mL of 0.10 M HCl
53. Blood is buffered by carbonic acid and the bicarbonate ion. Normal blood plasma is 0.024 M in HCO_3^- and 0.0012 M H_2CO_3 (pK_{a_1} for H_2CO_3 at body temperature is 6.1).
- What is the pH of blood plasma?
 - If the volume of blood in a normal adult is 5.0 L, what mass of HCl can be neutralized by the buffering system in blood before the pH falls below 7.0 (which would result in death)?
 - Given the volume from part b, what mass of NaOH can be neutralized before the pH rises above 7.8?
54. The fluids within cells are buffered by H_2PO_4^- and HPO_4^{2-} .
- Calculate the ratio of HPO_4^{2-} to H_2PO_4^- required to maintain a pH of 7.1 within a cell.
 - Could a buffer system employing H_3PO_4 as the weak acid and H_2PO_4^- as the weak base be used as a buffer system within cells? Explain.
55. Which buffer system is the best choice to create a buffer with $\text{pH} = 7.20$? For the best system, calculate the ratio of the masses of the buffer components required to make the buffer.
- | | |
|---|-------------------------------|
| $\text{HC}_2\text{H}_3\text{O}_2/\text{KC}_2\text{H}_3\text{O}_2$ | $\text{HClO}_2/\text{KClO}_2$ |
| $\text{NH}_3/\text{NH}_4\text{Cl}$ | HClO/KClO |
56. Which buffer system is the best choice to create a buffer with $\text{pH} = 9.00$? For the best system, calculate the ratio of the masses of the buffer components required to make the buffer.
- | | |
|------------------------------------|-----------------------------|
| HF/KF | $\text{HNO}_2/\text{KNO}_2$ |
| $\text{NH}_3/\text{NH}_4\text{Cl}$ | HClO/KClO |
57. A 500.0-mL buffer solution is 0.100 M in HNO_2 and 0.150 M in KNO_2 . Determine whether each addition would exceed the capacity of the buffer to neutralize it.
- 250.0 mg NaOH
 - 350.0 mg KOH
 - 1.25 g HBr
 - 1.35 g HI
58. A 1.0-L buffer solution is 0.125 M in HNO_2 and 0.145 M in NaNO_2 . Determine the concentrations of HNO_2 and NaNO_2 after the addition of each substance.
- 1.5 g HCl
 - 1.5 g NaOH
 - 1.5 g HI

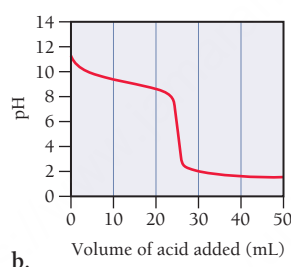
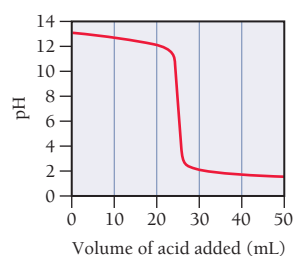
Titration, pH Curves, and Indicators

59. The graphs labeled (a) and (b) are the titration curves for two equal-volume samples of monoprotic acids, one weak and one strong. Both titrations were carried out with the same concentration of strong base.

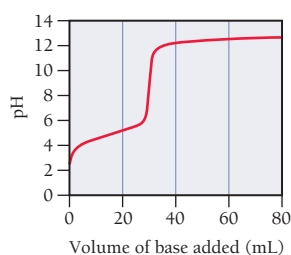


- What is the approximate pH at the equivalence point of each curve?
- Which graph corresponds to the titration of the strong acid and which one to the titration of the weak acid?

60. Two 25.0-mL samples, one 0.100 M HCl and the other 0.100 M HF, are titrated with 0.200 M KOH.
- What is the volume of added base at the equivalence point for each titration?
 - Is the pH at the equivalence point for each titration acidic, basic, or neutral?
 - Which titration curve has the lower initial pH?
 - Sketch each titration curve.
61. Two 20.0-mL samples, one 0.200 M KOH and the other 0.200 M CH_3NH_2 , are titrated with 0.100 M HI.
- What is the volume of added acid at the equivalence point for each titration?
 - Is the pH at the equivalence point for each titration acidic, basic, or neutral?
 - Which titration curve has the lower initial pH?
 - Sketch each titration curve.
62. The graphs labeled (a) and (b) are the titration curves for two equal-volume samples of bases, one weak and one strong. Both titrations were carried out with the same concentration of strong acid.

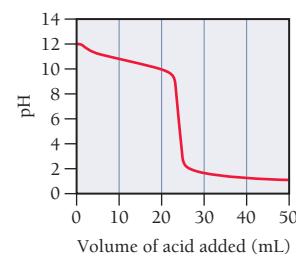


- What is the approximate pH at the equivalence point of each curve?
 - Which graph corresponds to the titration of the strong base and which one to the weak base?
63. Consider the curve shown here for the titration of a weak monoprotic acid with a strong base and answer each question.



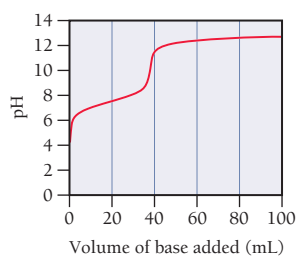
- What is the pH, and what is the volume of added base at the equivalence point?
- At what volume of added base is the pH calculated by working an equilibrium problem based on the initial concentration and K_a of the weak acid?
- At what volume of added base does $\text{pH} = \text{p}K_a$?
- At what volume of added base is the pH calculated by working an equilibrium problem based on the concentration and K_b of the conjugate base?
- Beyond what volume of added base is the pH calculated by focusing on the amount of excess strong base added?

64. Consider the curve shown here for the titration of a weak base with a strong acid and answer each question.

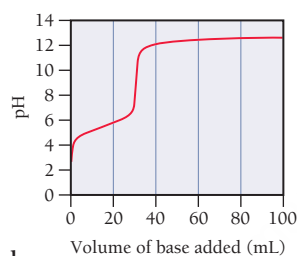


- What is the pH, and what is the volume of added acid at the equivalence point?
 - At what volume of added acid is the pH calculated by working an equilibrium problem based on the initial concentration and K_b of the weak base?
 - At what volume of added acid does $\text{pH} = 14 - \text{p}K_b$?
 - At what volume of added acid is the pH calculated by working an equilibrium problem based on the concentration and K_a of the conjugate acid?
 - Beyond what volume of added acid is the pH calculated by focusing on the amount of excess strong acid added?
65. Consider the titration of a 35.0-mL sample of 0.175 M HBr with 0.200 M KOH. Determine each quantity.
- the initial pH
 - the volume of added base required to reach the equivalence point
 - the pH at 10.0 mL of added base
 - the pH at the equivalence point
 - the pH after adding 5.0 mL of base beyond the equivalence point
66. A 20.0-mL sample of 0.125 M HNO_3 is titrated with 0.150 M NaOH. Calculate the pH for at least five different points on the titration curve and sketch the curve. Indicate the volume at the equivalence point on your graph.
67. Consider the titration of a 25.0-mL sample of 0.115 M RbOH with 0.100 M HCl. Determine each quantity.
- the initial pH
 - the volume of added acid required to reach the equivalence point
 - the pH at 5.0 mL of added acid
 - the pH at the equivalence point
 - the pH after adding 5.0 mL of acid beyond the equivalence point
68. A 15.0-mL sample of 0.100 M $\text{Ba}(\text{OH})_2$ is titrated with 0.125 M HCl. Calculate the pH for at least five different points on the titration curve and sketch the curve. Indicate the volume at the equivalence point on your graph.
69. Consider the titration of a 20.0-mL sample of 0.105 M $\text{HC}_2\text{H}_3\text{O}_2$ with 0.125 M NaOH. Determine each quantity.
- the initial pH
 - the volume of added base required to reach the equivalence point
 - the pH at 5.0 mL of added base
 - the pH at one-half of the equivalence point
 - the pH at the equivalence point
 - the pH after adding 5.0 mL of base beyond the equivalence point
70. A 30.0-mL sample of 0.165 M propanoic acid is titrated with 0.300 M KOH. Calculate the pH at each volume of added base: 0 mL, 5 mL, 10 mL, equivalence point, one-half equivalence point, 20 mL, 25 mL. Sketch the titration curve.

71. Consider the titration of a 25.0-mL sample of 0.175 M CH_3NH_2 with 0.150 M HBr. Determine each quantity.
- the initial pH
 - the volume of added acid required to reach the equivalence point
 - the pH at 5.0 mL of added acid
 - the pH at one-half of the equivalence point
 - the pH at the equivalence point
 - the pH after adding 5.0 mL of acid beyond the equivalence point
72. A 25.0-mL sample of 0.125 M pyridine is titrated with 0.100 M HCl. Calculate the pH at each volume of added acid: 0 mL, 10 mL, 20 mL, equivalence point, one-half equivalence point, 40 mL, 50 mL. Sketch the titration curve.
73. Consider the titration curves (labeled a and b) for equal volumes of two weak acids, both titrated with 0.100 M NaOH.

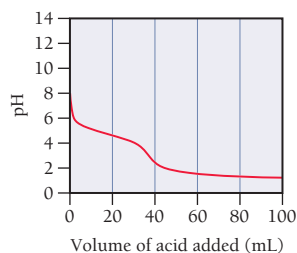


a.

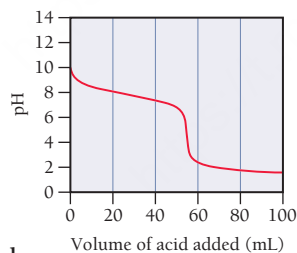


b.

- Which acid solution is more concentrated?
 - Which acid has the larger K_a ?
74. Consider the titration curves (labeled a and b) for equal volumes of two weak bases, both titrated with 0.100 M HCl.

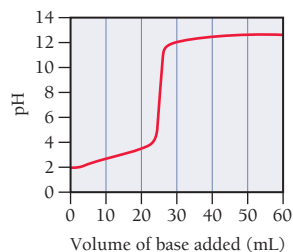


a.

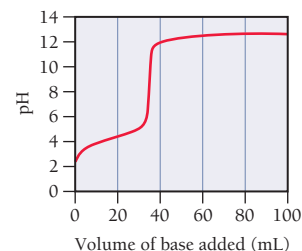


b.

- Which base solution is more concentrated?
 - Which base has the larger K_b ?
75. A 0.229-g sample of an unknown monoprotic acid is titrated with 0.112 M NaOH. The resulting titration curve is shown here. Determine the molar mass and pK_a of the acid.



76. A 0.446-g sample of an unknown monoprotic acid is titrated with 0.105 M KOH. The resulting titration curve is shown here. Determine the molar mass and pK_a of the acid.



77. A 20.0-mL sample of 0.115 M sulfurous acid (H_2SO_3) solution is titrated with 0.1014 M KOH. At what added volume of base solution does each equivalence point occur?
78. A 20.0-mL sample of a 0.125 M diprotic acid (H_2A) solution is titrated with 0.1019 M KOH. The acid ionization constants for the acid are $K_{a1} = 5.2 \times 10^{-5}$ and $K_{a2} = 3.4 \times 10^{-10}$. At what added volume of base does each equivalence point occur?
79. Methyl red has a pK_a of 5.0 and is red in its acid form and yellow in its basic form. If several drops of this indicator are placed in a 25.0-mL sample of 0.100 M HCl, what color does the solution appear? If 0.100 M NaOH is slowly added to the HCl sample, in what pH range will the indicator change color?
80. Phenolphthalein has a pK_a of 9.7. It is colorless in its acid form and pink in its basic form. For each of the pH values, calculate $[\text{In}^-]/[\text{HIn}]$ and predict the color of a phenolphthalein solution.
- pH = 2.0
 - pH = 5.0
 - pH = 8.0
 - pH = 11.0
81. Referring to Table 17.1, pick an indicator for use in the titration of each acid with a strong base.
- HF
 - HCl
 - HCN
82. Referring to Table 17.1, pick an indicator for use in the titration of each base with a strong acid.
- CH_3NH_2
 - NaOH
 - $\text{C}_6\text{H}_5\text{NH}_2$

Solubility Equilibria

83. Write balanced equations and expressions for K_{sp} for the dissolution of each ionic compound.
- BaSO_4
 - PbBr_2
 - Ag_2CrO_4
84. Write balanced equations and expressions for K_{sp} for the dissolution of each ionic compound.
- CaCO_3
 - PbCl_2
 - AgI
85. Refer to the K_{sp} values in Table 17.2 to calculate the molar solubility of each compound in pure water.
- AgBr
 - $\text{Mg}(\text{OH})_2$
 - CaF_2
86. Refer to the K_{sp} values in Table 17.2 to calculate the molar solubility of each compound in pure water.
- MX ($K_{sp} = 1.27 \times 10^{-36}$)
 - Ag_2CrO_4
 - $\text{Ca}(\text{OH})_2$
87. Use the given molar solubilities in pure water to calculate K_{sp} for each compound.
- MX; molar solubility = 3.27×10^{-11} M
 - PbF_2 ; molar solubility = 5.63×10^{-3} M
 - MgF_2 ; molar solubility = 2.65×10^{-4} M

88. Use the given molar solubilities in pure water to calculate K_{sp} for each compound.
- BaCrO_4 ; molar solubility = $1.08 \times 10^{-5} \text{ M}$
 - Ag_2SO_3 ; molar solubility = $1.55 \times 10^{-5} \text{ M}$
 - $\text{Pd}(\text{SCN})_2$; molar solubility = $2.22 \times 10^{-8} \text{ M}$
89. Two compounds with general formulas AX and AX_2 have $K_{sp} = 1.5 \times 10^{-5}$. Which of the two compounds has the higher molar solubility?
90. Consider the compounds with the generic formulas listed and their corresponding molar solubilities in pure water. Which compound has the smallest value of K_{sp} ?
- AX ; molar solubility = $1.35 \times 10^{-4} \text{ M}$
 - AX_2 ; molar solubility = $2.25 \times 10^{-4} \text{ M}$
 - A_2X ; molar solubility = $1.75 \times 10^{-4} \text{ M}$
91. Refer to the K_{sp} value from Table 17.2 to calculate the solubility of iron(II) hydroxide in pure water in grams per 100.0 mL of solution.
92. The solubility of copper(I) chloride is 3.91 mg per 100.0 mL of solution. Calculate K_{sp} for CuCl .
93. Calculate the molar solubility of barium fluoride in each liquid or solution.
- pure water
 - 0.10 M $\text{Ba}(\text{NO}_3)_2$
 - 0.15 M NaF
94. Calculate the molar solubility of MX ($K_{sp} = 1.27 \times 10^{-36}$) in each liquid or solution.
- pure water
 - 0.25 M MCl_2
 - 0.20 M Na_2X
95. Calculate the molar solubility of calcium hydroxide in a solution buffered at each pH.
- pH = 4
 - pH = 7
 - pH = 9
96. Calculate the solubility (in grams per $1.00 \times 10^2 \text{ mL}$ of solution) of magnesium hydroxide in a solution buffered at pH = 10. How does this compare to the solubility of $\text{Mg}(\text{OH})_2$ in pure water?
97. Is each compound more soluble in acidic solution or in pure water? Explain.
- BaCO_3
 - CuS
 - AgCl
 - PbI_2
98. Is each compound more soluble in acidic solution or in pure water? Explain.
- Hg_2Br_2
 - $\text{Mg}(\text{OH})_2$
 - CaCO_3
 - AgI
100. A solution containing potassium bromide is mixed with one containing lead acetate to form a solution that is 0.013 M in KBr and 0.0035 M in $\text{Pb}(\text{C}_2\text{H}_3\text{O}_2)_2$. Does a precipitate form in the mixed solution? If so, identify the precipitate.
101. Predict whether a precipitate forms if you mix 75.0 mL of a NaOH solution with $\text{pOH} = 2.58$ with 125.0 mL of a 0.018 M MgCl_2 solution. Identify the precipitate, if any.
102. Predict whether a precipitate forms if you mix 175.0 mL of a 0.0055 M KCl solution with 145.0 mL of a 0.0015 M AgNO_3 solution. Identify the precipitate, if any.
103. Potassium hydroxide is used to precipitate each of the cations from their respective solution. Determine the minimum concentration of KOH required for precipitation to begin in each case.
- 0.015 M CaCl_2
 - 0.0025 M $\text{Fe}(\text{NO}_3)_2$
 - 0.0018 M MgBr_2
104. Determine the minimum concentration of the precipitating agent on the right you need to cause precipitation of the cation from the solution on the left.
- 0.035 M $\text{Ba}(\text{NO}_3)_2$; NaF
 - 0.085 M CaI_2 ; K_2SO_4
 - 0.0018 M AgNO_3 ; RbCl
105. A solution is 0.010 M in Ba^{2+} and 0.020 M in Ca^{2+} .
- If sodium sulfate is used to selectively precipitate one of the cations while leaving the other cation in solution, which cation precipitates first? What minimum concentration of Na_2SO_4 will trigger the precipitation of the cation that precipitates first?
 - What is the remaining concentration of the cation that precipitates first, when the other cation begins to precipitate?
106. A solution is 0.022 M in Fe^{2+} and 0.014 M in Mg^{2+} .
- If potassium carbonate is used to selectively precipitate one of the cations while leaving the other cation in solution, which cation precipitates first? What minimum concentration of K_2CO_3 will trigger the precipitation of the cation that precipitates first?
 - What is the remaining concentration of the cation that precipitates first, when the other cation begins to precipitate?

Complex Ion Equilibria

107. A solution is made $1.1 \times 10^{-3} \text{ M}$ in $\text{Zn}(\text{NO}_3)_2$ and 0.150 M in NH_3 . After the solution reaches equilibrium, what concentration of $\text{Zn}^{2+}(\text{aq})$ remains?
108. A 120.0-mL sample of a solution that is $2.8 \times 10^{-3} \text{ M}$ in AgNO_3 is mixed with a 225.0-mL sample of a solution that is 0.10 M in NaCN . After the solution reaches equilibrium, what concentration of $\text{Ag}^+(\text{aq})$ remains?
109. Use the appropriate values of K_{sp} and K_f to find the equilibrium constant for the reaction:
- $$\text{FeS}(\text{s}) + 6 \text{CN}^-(\text{aq}) \rightleftharpoons \text{Fe}(\text{CN})_6^{4-}(\text{aq}) + \text{S}^{2-}(\text{aq})$$
110. Use the appropriate values of K_{sp} and K_f to find the equilibrium constant for the reaction:
- $$\text{PbCl}_2(\text{s}) + 3 \text{OH}^-(\text{aq}) \rightleftharpoons \text{Pb}(\text{OH})_3^-(\text{aq}) + 2 \text{Cl}^-(\text{aq})$$

Precipitation

99. A solution containing sodium fluoride is mixed with one containing calcium nitrate to form a solution that is 0.015 M in NaF and 0.010 M in $\text{Ca}(\text{NO}_3)_2$. Does a precipitate form in the mixed solution? If so, identify the precipitate.

CUMULATIVE PROBLEMS

111. A 150.0-mL solution contains 2.05 g of sodium benzoate and 2.47 g of benzoic acid. Calculate the pH of the solution.
112. A solution is made by combining 10.0 mL of 17.5 M acetic acid with 5.54 g of sodium acetate and diluting to a total volume of 1.50 L. Calculate the pH of the solution.
113. A buffer is created by combining 150.0 mL of 0.25 M HCHO_2 with 75.0 mL of 0.20 M NaOH. Determine the pH of the buffer.
114. A buffer is created by combining 3.55 g of NH_3 with 4.78 g of HCl and diluting to a total volume of 750.0 mL. Determine the pH of the buffer.
115. A 1.0-L buffer solution initially contains 0.25 mol of NH_3 and 0.25 mol of NH_4Cl . In order to adjust the buffer pH to 8.75, should you add NaOH or HCl to the buffer mixture? What mass of the correct reagent should you add?
116. A 250.0-mL buffer solution initially contains 0.025 mol of HCHO_2 and 0.025 mol of NaCHO_2 . In order to adjust the buffer pH to 4.10, should you add NaOH or HCl to the buffer mixture? What mass of the correct reagent should you add?
117. In analytical chemistry, bases used for titrations must often be standardized; that is, their concentration must be precisely determined. Standardization of sodium hydroxide solutions can be accomplished by titrating potassium hydrogen phthalate ($\text{KHC}_8\text{H}_4\text{O}_4$), also known as KHP, with the NaOH solution to be standardized.
 - a. Write an equation for the reaction between NaOH and KHP.
 - b. The titration of 0.5527 g of KHP required 25.87 mL of an NaOH solution to reach the equivalence point. What is the concentration of the NaOH solution?
118. A 0.5224-g sample of an unknown monoprotic acid was titrated with 0.0998 M NaOH. The equivalence point of the titration occurs at 23.82 mL. Determine the molar mass of the unknown acid.
119. A 0.25-mol sample of a weak acid with an unknown pK_a is combined with 10.0 mL of 3.00 M KOH, and the resulting solution is diluted to 1.500 L. The measured pH of the solution is 3.85. What is the pK_a of the weak acid?
120. A 5.55-g sample of a weak acid with $K_a = 1.3 \times 10^{-4}$ is combined with 5.00 mL of 6.00 M NaOH, and the resulting solution is diluted to 750 mL. The measured pH of the solution is 4.25. What is the molar mass of the weak acid?
121. A 0.552-g sample of ascorbic acid (vitamin C) is dissolved in water to a total volume of 20.0 mL and titrated with 0.1103 M KOH. The equivalence point occurs at 28.42 mL. The pH of the solution at 10.0 mL of added base was 3.72. From this data, determine the molar mass and K_a for vitamin C.
122. Sketch the titration curve from Problem 121 by calculating the pH at the beginning of the titration, at one-half of the equivalence point, at the equivalence point, and at 5.0 mL beyond the equivalence point. Pick a suitable indicator for this titration from Table 17.1.
123. One of the main components of hard water is CaCO_3 . When hard water evaporates, some of the CaCO_3 is left behind as a white mineral deposit. If a hard water solution is saturated with calcium carbonate, what volume of the solution has to evaporate to deposit 1.00×10^2 mg of CaCO_3 ?
124. Gout—a condition that results in joint swelling and pain—is caused by the formation of sodium urate ($\text{NaC}_5\text{H}_3\text{N}_4\text{O}_3$) crystals within tendons, cartilage, and ligaments. Sodium urate precipitates out of blood plasma when uric acid levels become abnormally high. This can happen as a result of eating too many rich foods and consuming too much alcohol, which is why gout is sometimes referred to as the “disease of kings.” If the sodium concentration in blood plasma is 0.140 M and K_{sp} for sodium urate is 5.76×10^{-8} , what minimum concentration of urate results in precipitation?
125. Pseudogout, a condition with symptoms similar to those of gout (see Problem 124), is caused by the formation of calcium diphosphate ($\text{Ca}_2\text{P}_2\text{O}_7$) crystals within tendons, cartilage, and ligaments. Calcium diphosphate precipitates out of blood plasma when diphosphate levels become abnormally high. If the calcium concentration in blood plasma is 9.2 mg/dL and K_{sp} for calcium diphosphate is 8.64×10^{-13} , what minimum concentration of diphosphate results in precipitation?
126. Calculate the solubility of silver chloride in a solution that is 0.100 M in NH_3 .
127. Calculate the solubility of CuX in a solution that is 0.150 M in NaCN. K_{sp} for CuX is 1.27×10^{-36} .
128. Aniline, $\text{C}_6\text{H}_5\text{NH}_2$, is an important organic base used in the manufacture of dyes. It has $K_b = 4.3 \times 10^{-10}$. In a certain manufacturing process, it is necessary to keep the concentration of $\text{C}_6\text{H}_5\text{NH}_3^+$ (aniline’s conjugate acid, the anilinium ion) below 1.0×10^{-9} M in a solution that is 0.10 M in aniline. Find the concentration of NaOH required for this process.
129. The K_b of hydroxylamine, NH_2OH , is 1.10×10^{-8} . A buffer solution is prepared by mixing 100.0 mL of a 0.36 M hydroxylamine solution with 50.0 mL of a 0.26 M HCl solution. Determine the pH of the resulting solution.
130. A 0.867-g sample of an unknown acid requires 32.2 mL of a 0.182 M barium hydroxide solution for neutralization. Assuming the acid is diprotic, calculate the molar mass of the acid.
131. A 25.0-mL volume of a sodium hydroxide solution requires 19.6 mL of a 0.189 M hydrochloric acid for neutralization. A 10.0-mL volume of a phosphoric acid solution requires 34.9 mL of the sodium hydroxide solution for complete neutralization. Calculate the concentration of the phosphoric acid solution.
132. Determine the mass of sodium formate that must be dissolved in 250.0 cm^3 of a 1.4 M solution of formic acid to prepare a buffer solution with $\text{pH} = 3.36$.
133. What relative masses of dimethyl amine and dimethyl ammonium chloride do you need to prepare a buffer solution of $\text{pH} = 10.43$?
134. You are asked to prepare 2.0 L of a HCN/NaCN buffer that has a pH of 9.8 and an osmotic pressure of 1.35 atm at 298 K. What masses of HCN and NaCN should you use to prepare the buffer? (Assume complete dissociation of NaCN.)
135. What should the molar concentrations of benzoic acid and sodium benzoate be in a solution that is buffered at a pH of 4.55 and has a freezing point of -2.0°C ? (Assume complete dissociation of sodium benzoate and a density of 1.01 g/mL for the solution.)

CHALLENGE PROBLEMS

136. Derive an equation similar to the Henderson–Hasselbalch equation for a buffer composed of a weak base and its conjugate acid. Instead of relating pH to pK_a and the relative concentrations of an acid and its conjugate base (as the Henderson–Hasselbalch equation does), the equation should relate pOH to pK_b and the relative concentrations of a base and its conjugate acid.
137. Soap and detergent action is hindered by hard water so that laundry formulations usually include water softeners—called builders—designed to remove hard-water ions (especially Ca^{2+} and Mg^{2+}) from the water. A common builder used in North America is sodium carbonate. Suppose that the hard water used to do laundry contains 75 ppm $CaCO_3$ and 55 ppm $MgCO_3$ (by mass). What mass of Na_2CO_3 is required to remove 90.0% of these ions from 10.0 L of laundry water?
138. A 0.558-g sample of a diprotic acid with a molar mass of 255.8 g/mol is dissolved in water to a total volume of 25.0 mL. The solution is then titrated with a saturated calcium hydroxide solution.
- Assuming that the pK_a values for each ionization step are sufficiently different to see two equivalence points, determine the volume of added base for the first and second equivalence points.
 - The pH after adding 25.0 mL of the base is 3.82. Find the value of K_{a1} .
 - The pH after adding 20.0 mL past the first equivalence point is 8.25. Find the value of K_{a2} .
139. When excess solid $Mg(OH)_2$ is shaken with 1.00 L of 1.0 M NH_4Cl solution, the resulting saturated solution has pH = 9.00. Calculate the K_{sp} of $Mg(OH)_2$.
140. What amount of solid NaOH must be added to 1.0 L of a 0.10 M H_2CO_3 solution to produce a solution with $[H^+] = 3.2 \times 10^{-11}$ M? There is no significant volume change as the result of adding the solid.
141. Calculate the solubility of $Au(OH)_3$ in (a) water and (b) 1.0 M nitric acid solution ($K_{sp} = 5.5 \times 10^{-46}$).
142. Calculate the concentration of I^- in a solution obtained by shaking 0.10 M KI with an excess of AgCl(s).
143. What volume of 0.100 M sodium carbonate solution is required to precipitate 99% of the Mg from 1.00 L of 0.100 M magnesium nitrate solution?
144. Find the solubility of CuI in 0.40 M HCN solution. The K_{sp} of CuI is 1.1×10^{-12} , and the K_f for the $Cu(CN)_2^-$ complex ion is 1×10^{24} .
145. Find the pH of a solution prepared from 1.0 L of a 0.10 M solution of $Ba(OH)_2$ and excess $Zn(OH)_2(s)$. The K_{sp} of $Zn(OH)_2$ is 3×10^{-15} , and the K_f of $Zn(OH)_4^{2-}$ is 2×10^{15} .
146. What amount of HCl gas must be added to 1.00 L of a buffer solution that contains [acetic acid] = 2.0 M and [acetate] = 1.0 M in order to produce a solution with pH = 4.00?

CONCEPTUAL PROBLEMS

147. Without doing any calculations, determine if pH = pK_a , pH > pK_a , or pH < pK_a . Assume that HA is a weak monoprotic acid.
- 0.10 mol HA and 0.050 mol of A^- in 1.0 L of solution
 - 0.10 mol HA and 0.150 mol of A^- in 1.0 L of solution
 - 0.10 mol HA and 0.050 mol of OH^- in 1.0 L of solution
 - 0.10 mol HA and 0.075 mol of OH^- in 1.0 L of solution
148. A buffer contains 0.10 mol of a weak acid and 0.20 mol of its conjugate base in 1.0 L of solution. Determine whether or not each addition exceeds the capacity of the buffer.
- adding 0.020 mol of NaOH
 - adding 0.020 mol of HCl
 - adding 0.10 mol of NaOH
 - adding 0.010 mol of HCl
149. Consider three solutions:
- 0.10 M solution of a weak monoprotic acid
 - 0.10 M solution of strong monoprotic acid
 - 0.10 M solution of a weak diprotic acid
- Each solution is titrated with 0.15 M NaOH. Which quantity is the same for all three solutions?
- the volume required to reach the final equivalence point
 - the volume required to reach the first equivalence point
 - the pH at the first equivalence point
 - the pH at one-half the first equivalence point
150. Equal volumes of two monoprotic acid solutions (A and B) are titrated with identical NaOH solutions. The volume needed to reach the equivalence point for solution A is twice the volume required to reach the equivalence point for solution B, and the pH at the equivalence point of solution A is higher than the pH at the equivalence point for solution B. Which statement is true?
- The acid in solution A is more concentrated than in solution B and is also a stronger acid than that in solution B.
 - The acid in solution A is less concentrated than in solution B and is also a weaker acid than that in solution B.
 - The acid in solution A is more concentrated than in solution B and is also a weaker acid than that in solution B.
 - The acid in solution A is less concentrated than in solution B and is also a stronger acid than that in solution B.
151. Describe the solubility of CaF_2 in each solution compared to its solubility in water.
- in a 0.10 M NaCl solution
 - in a 0.10 M NaF solution
 - in a 0.10 M HCl solution

QUESTIONS FOR GROUP WORK

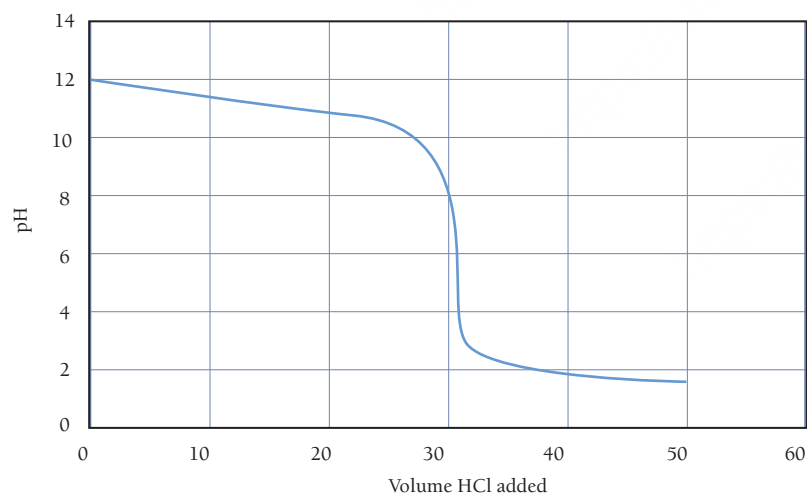
Active Classroom Learning

Discuss these questions with the group and record your consensus answer.

152. Name a compound that you could add to a solution of each of the following compounds to make a buffer. Explain your reasoning in complete sentences.
 - a. acetic acid
 - b. sodium nitrite
 - c. ammonia
 - d. potassium formate
 - e. Na_2HPO_4 (two possible answers)
153. Derive the Henderson–Hasselbalch equation as a group. Take turns having each group member write and explain the next step in the derivation.
154. With group members acting as atoms or ions, act out the reaction that occurs when HCl is added to a buffer solution composed of $\text{HC}_2\text{H}_3\text{O}_2$ and $\text{NaC}_2\text{H}_3\text{O}_2$. Write out a script for a narrator that describes the processes that occur, including how the buffer keeps the pH approximately the same even though a strong acid is added.
155. A certain town gets its water from an underground aquifer that contains water in equilibrium with calcium carbonate limestone.
 - a. What is the symbol for the equilibrium constant that describes calcium carbonate dissolving in water? What is the numerical value?
 - b. Calculate the molar solubility of calcium carbonate.
 - c. If you were a resident of this town and an entire coffee cup of water (about 200 mL) evaporated on your desk over spring break, how many grams of calcium carbonate would be left behind?
 - d. If you wanted to clean out your coffee cup, would it be better to use an acidic or a basic cleaning solution? Why?
156. Have each group member look up the K_{sp} for a different compound. Calculate the molar solubility. Do the numerical values suggest that the compound is soluble or insoluble? Compare answers with the solubility rules from Chapter 8, and have each group member present his or her findings to the group.

DATA INTERPRETATION AND ANALYSIS

157. A base is known to be one of the three listed in the table. You are given a sample of the base and asked to identify it. To do so, you dissolve 0.30 g of the base in enough water to make 25.0 mL of the basic solution. You then titrate the solution with 0.100 M HCl and record the pH as a function of the added acid, resulting in the titration curve that follows. Examine the table and the titration curve and answer the questions.



▲ Titration Curve for 0.30 g of Unknown Base Dissolved in 25.0 mL of Solution

Possible Bases in Sample

Base	K_{b}
Pyridine ($\text{C}_5\text{H}_5\text{N}$)	1.7×10^{-9}
Aniline ($\text{C}_6\text{H}_5\text{NH}_2$)	3.9×10^{-10}
Triethylamine ($\text{C}_6\text{H}_{15}\text{N}$)	5.6×10^{-4}


- a. What is the volume of added HCl at the equivalence point?
- b. What is the pH at the half-equivalence point?
- c. What is the molar mass of the unknown base?
- d. What are the $\text{p}K_{\text{b}}$ and K_{b} of the unknown base?
- e. What is the most likely identity of the unknown base?

ANSWERS TO CONCEPTUAL CONNECTIONS

- Cc 17.1 (d) Only this solution contains significant amounts of a weak acid and its conjugate base. (Remember that HNO_3 is a strong acid, but HNO_2 is a weak acid.)
- Cc 17.2 (a) Since the pH of the buffer is less than the $\text{p}K_a$ of the acid, the buffer must contain more acid than base ($[\text{HA}] > [\text{A}^-]$). In order to raise the pH of the buffer from 4.25 to 4.72, you must add more of the weak base (adding a base will make the buffer solution more basic).
- Cc 17.3 (a) Because one HA molecule is converted to one ion of the conjugate base (A^- ion), one OH^- ion was added to the buffer solution.
- Cc 17.4 (b) Since acid is added to the buffer, the pH will become slightly lower (slightly more acidic). Answer (a) reflects too large a change in pH for a buffer, and answers (c) and (d) have the pH changing in the wrong direction.
- Cc 17.5 (a) Adding 0.050 mol of HCl destroys the buffer because it will react with all of the NaF, leaving no conjugate base in the buffer mixture.
- Cc 17.6 (d) Because the flask contains 7 H^+ ions, the equivalence point is reached when 7 OH^- ions have been added.
- Cc 17.7 Acid A is more concentrated (it took more NaOH to reach the equivalence point), and acid B has the larger K_a ($\text{p}K_a$ is smaller so K_a is larger).
- Cc 17.8 (c) The pH at the half-equivalence point is the $\text{p}K_a$ of the conjugate acid, which is equal to $14.00 - 8.75 = 5.25$.
- Cc 17.9 (c) Since the volumes and concentrations of all three acids are the same, the volume of NaOH required to reach the first equivalence point (and the only equivalence point for titrations i and iii) is the same for all three titrations.
- Cc 17.10 (c) The sodium nitrate solution is the only one that has no common ion with barium sulfate. The other two solutions have common ions with barium sulfate; therefore, the solubility of barium sulfate is lower in these solutions.
- Cc 17.11 (c) Only NaCN contains an anion (CN^-) that forms a complex ion with Cu^{2+} [from Table 17.3 we can see that $K_f = 1.0 \times 10^{25}$ for $\text{Cu}(\text{CN})_4^{2-}$]. Therefore, the presence of CN^- will drive the dissolution reaction of CuS.

- 18.1** Nature's Heat Tax: You Can't Win and You Can't Break Even 797
- 18.2** Spontaneous and Nonspontaneous Processes 798
- 18.3** Entropy and the Second Law of Thermodynamics 799
- 18.4** Entropy Changes Associated with State Changes 804
- 18.5** Heat Transfer and Entropy Changes of the Surroundings 807
- 18.6** Gibbs Free Energy 811

- 18.7** Entropy Changes in Chemical Reactions: Calculating $\Delta S_{\text{rxn}}^{\circ}$ 815
 - 18.8** Free Energy Changes in Chemical Reactions: Calculating $\Delta G_{\text{rxn}}^{\circ}$ 820
 - 18.9** Free Energy Changes for Nonstandard States: The Relationship between $\Delta G_{\text{rxn}}^{\circ}$ and ΔG_{rxn} 826
 - 18.10** Free Energy and Equilibrium: Relating $\Delta G_{\text{rxn}}^{\circ}$ to the Equilibrium Constant (K) 829
- Key Learning Outcomes** 833



In this clever illusion, it seems that water can perpetually flow through the canal. However, perpetual motion is forbidden under the laws of thermodynamics.

CHAPTER

18

Free Energy and Thermodynamics

THROUGHOUT THIS BOOK, we have examined chemical and physical changes. We have studied how fast chemical changes occur (kinetics) and how to predict how far they will go (through the use of equilibrium constants). We have discussed how acids neutralize bases and how gases expand to fill their containers. We now turn to the following question: Why do these changes occur in the first place? What ultimately drives physical and chemical changes in matter? The answer may surprise you. The driving force behind chemical and physical change in the universe is a quantity called *entropy*, which is related to the *dispersion* (or spreading out) of energy. In this chapter, we examine entropy and how we can use it to predict the direction of spontaneous change in chemical processes.

**“The law that entropy always increases—
the second law of thermodynamics—
holds, I think, the supreme position
among the laws of Nature.”**

—Sir Arthur Eddington (1882–1944)

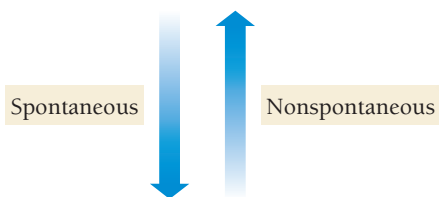
18.1 Nature’s Heat Tax: You Can’t Win and You Can’t Break Even

Energy transactions are like gambling—you walk into the casino with your pockets full of cash and (if you keep gambling long enough) you walk out empty-handed. In the long run, you lose money gambling because the casino takes a cut on each transaction. So it is with energy. Nature takes a cut—sometimes referred to as “nature’s heat tax”—on every energy transaction so that, in the end, energy is dissipated (dispersed or scattered).

Recall from Section 9.3 that, according to the first law of thermodynamics, energy is conserved in chemical processes. When we burn gasoline to run a car, for example, the amount of energy produced by the chemical reaction does not vanish, nor does any new energy appear that was not present as potential energy (within the gasoline) before the combustion. Some of the energy from the combustion reaction goes toward driving the car forward (about 20%), and the rest is dissipated into the surroundings as heat (feel the hood of a car after a drive if you doubt this). The total energy given off by the combustion reaction exactly equals the sum of the amount of energy that goes to propel the car plus the amount dissipated as heat—energy is conserved. In other words, when it comes to energy, we can’t win; we cannot create energy that was not there to begin with.



▲ A rechargeable battery requires more energy to charge than the energy available for work during discharging because some energy is always lost to the surroundings during the charging/discharging cycle.



▲ Iron spontaneously rusts when it comes in contact with oxygen.

► FIGURE 18.1 Thermodynamics and Kinetics

Thermodynamics deals with the relative chemical potentials of the reactants and products. It enables us to predict whether a reaction will be spontaneous and to calculate how much work it can do. Kinetics involves the chemical potential of intermediate states and enables us to determine why a reaction is slow or fast.

The picture becomes more interesting, however, when we consider the second law of thermodynamics. The second law—which we examine in more detail throughout this chapter—implies that not only can we not win in an energy transaction, we *cannot even break even*. For example, consider a rechargeable battery. Suppose that when we use the fully charged battery for some application, the energy from the battery does 100 kJ of work. Recharging the battery to its original state will *necessarily* (according to the second law of thermodynamics) require *more than* 100 kJ of energy. Energy is not destroyed during the cycle of discharging and recharging the battery, but some energy must be lost to the surroundings in order for the process to occur at all. Nature imposes a heat tax, an unavoidable cut of every energy transaction.

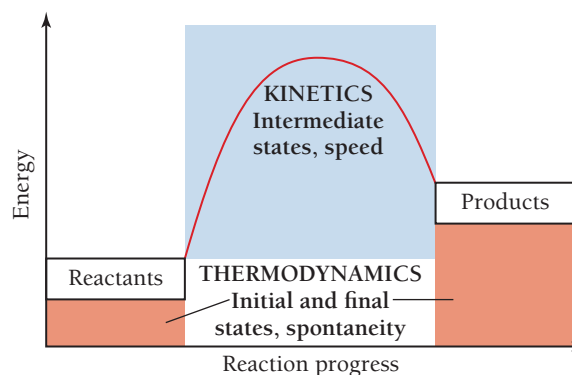
The implications of the second law for energy use are significant. First of all, according to the second law, we cannot create a perpetual motion machine (a machine that perpetually moves *without any energy input*). If the machine is to be in motion, it must pay the heat tax with each cycle of its motion—over time, it therefore runs down and stops moving.

Second, in most energy transactions, not only is the heat tax lost to the surroundings, but additional energy is also lost as heat because real-world processes do not achieve the theoretically possible maximum efficiency. Consequently, the most efficient use of energy generally occurs with the fewest transactions. For example, heating your home with natural gas is generally cheaper and more efficient than heating it with electricity. When you heat your home with natural gas, there is only one energy transaction—you burn the gas and the heat from the reaction warms the house. When you heat your home with electricity, several transactions occur. Most electricity is generated from the combustion of fossil fuels; the heat from the burning fuel boils water to create steam. The steam then turns a turbine on a generator to create electricity. The electricity travels from the power plant to your home, and some of the energy is lost as heat during the trip. Finally, the electricity runs the heater that generates heat. With each transaction, energy is lost to the surroundings, resulting in a less efficient use of energy than if you burn natural gas directly.

18.2 Spontaneous and Nonspontaneous Processes

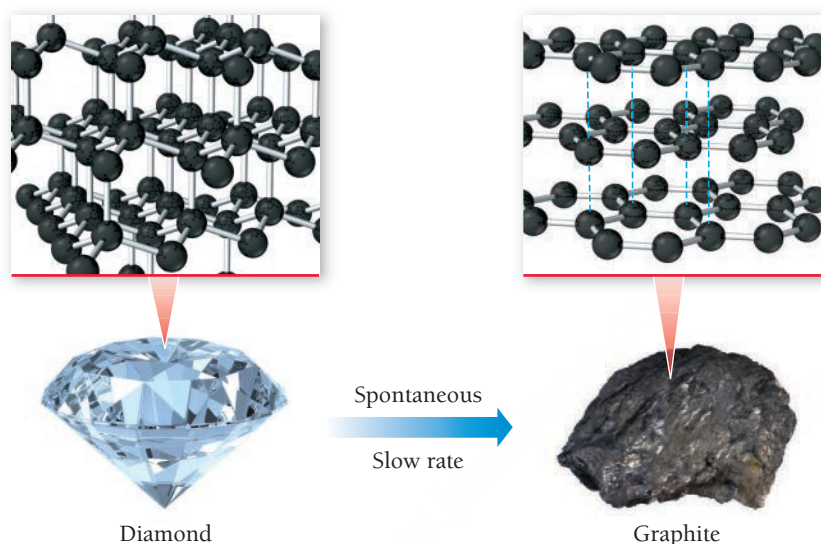
The study of thermodynamics helps us to understand and predict whether a particular process occurs spontaneously. For example, does rust spontaneously form when iron comes into contact with oxygen? Does water spontaneously decompose into hydrogen and oxygen? A **spontaneous process** is one that occurs *without ongoing outside intervention* (such as the performance of work by some external force). For example, when we drop a book in a gravitational field, it spontaneously drops to the floor. When we place a ball on a slope, it spontaneously rolls down the slope. Both of these processes are spontaneous.

For chemical processes, we must be careful not to confuse the *spontaneity* of the process with its *speed*. In chemical thermodynamics, we study the *spontaneity* of a reaction—the direction in which and the extent to which a chemical reaction proceeds. In kinetics, we study the *speed* of the reaction—how fast it takes place (**Figure 18.1** ▼). A reaction may be thermodynamically spontaneous but kinetically slow at a given temperature. For example, the conversion of diamond to graphite is thermodynamically spontaneous. But your diamonds will not become worthless anytime soon because the process is extremely slow kinetically. Although the rate of a spontaneous process can be increased by using a



catalyst, a catalyst cannot make a nonspontaneous process spontaneous. Catalysts affect only the rate of a reaction, not the spontaneity.

One last word about nonspontaneity—a nonspontaneous process is not *impossible*. For example, the extraction of iron metal from iron ore is a nonspontaneous process; it does not happen if the iron ore is left to itself, but that does not mean it is impossible. As we will see later in this chapter, a nonspontaneous process can be made spontaneous by coupling it to another process that is spontaneous or by supplying energy from an external source. Iron can be separated from its ore if external energy is supplied, usually by means of another reaction (that is highly spontaneous).



◀ Even though graphite is thermodynamically more stable than diamond, the conversion of diamond to graphite is kinetically so slow that it does not occur at any measurable rate.


18.3 Entropy and the Second Law of Thermodynamics

It might initially seem that the way to judge the spontaneity of a chemical process is to examine the change in enthalpy for the process (see Section 9.6). Perhaps, just as a mechanical system proceeds in the direction of lowest potential energy, so a chemical system might proceed in the direction of lowest enthalpy. If this were the case, all exothermic reactions would be spontaneous and all endothermic reactions would not. However, although *most* spontaneous processes are exothermic, some spontaneous processes are *endothermic*. For example, liquid water spilled on the floor at room temperature spontaneously evaporates even though the process is endothermic. Similarly, sodium chloride spontaneously dissolves in water, even though the process is slightly endothermic. These examples indicate that enthalpy is not the sole criterion for spontaneity.

The evaporation of water and the dissolution of sodium chloride in water are both endothermic *and* spontaneous. What drives these processes? In each process, energy spreads out (or disperses) as the process occurs. During the evaporation of water, the thermal energy of the water molecules spreads out from a smaller volume (the volume of the liquid) into a much larger volume (the volume of the gas) as the water evaporates. Recall that a gas occupies a much larger volume than its corresponding liquid because the molecules have much more empty space between them.



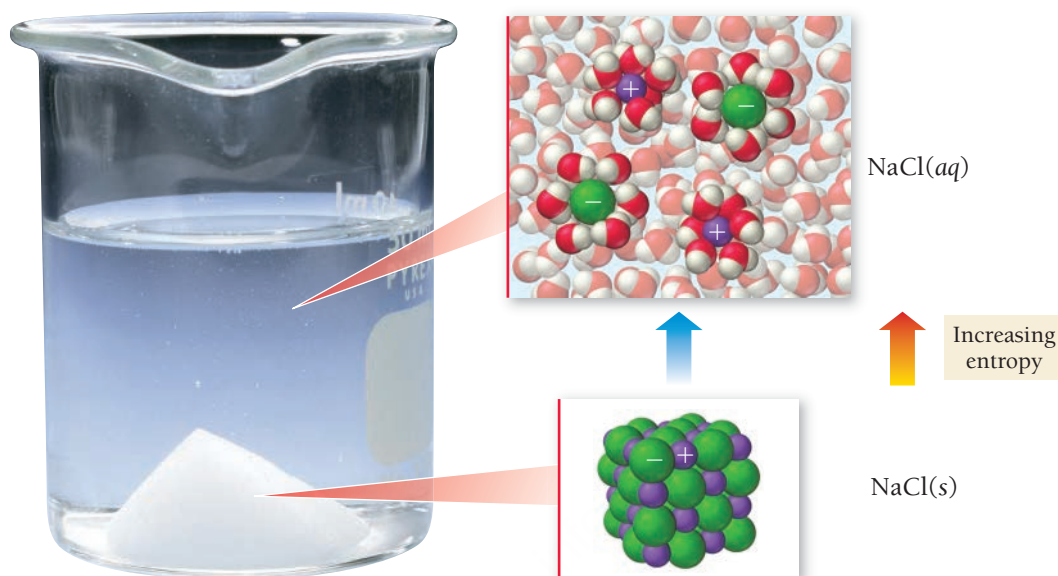
KEY CONCEPT VIDEO
Entropy and the Second Law of Thermodynamics



▲ When water evaporates, the thermal energy contained in the water molecules spreads out over a larger volume.

In the dissolution of a salt into water, the thermal energy contained in the salt crystals spreads out over the entire volume of the solution as the salt dissolves. In both of these processes, a quantity called *entropy*—related to the spreading out of energy—increases.

► When salt dissolves in water, entropy increases.



Entropy

Entropy is the criterion for spontaneity in all systems, including chemical systems. Formally, **entropy**, abbreviated by the symbol S , has the following definition:

Entropy (S) is a thermodynamic function that increases with the number of energetically equivalent ways to arrange the components of a system to achieve a particular state.

Austrian physicist Ludwig Boltzmann (1844–1906) expressed this definition mathematically in the 1870s as

$$S = k \ln W$$



▲ Boltzmann's equation is engraved on his tombstone.


where k is the Boltzmann constant (the gas constant divided by Avogadro's number, $R/N_A = 1.38 \times 10^{-23} \text{ J/K}$) and W is the number of energetically equivalent ways to arrange the components of the system. Since W is unitless (it is simply a number), the units of entropy are joules per kelvin (J/K). We discuss the significance of the units shortly. As we can see from the equation, as W increases, entropy increases.

The key to understanding entropy is the quantity W . What does W —the number of energetically equivalent ways to arrange the components of the system—signify? In order to answer this question, we must first understand how the energy of a system can distribute itself among the system's particles.

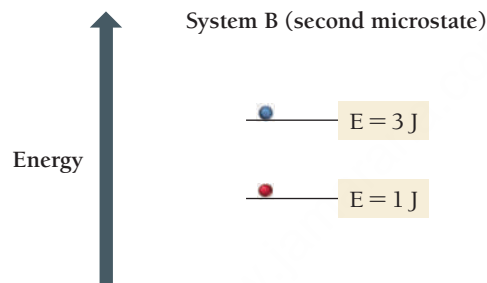
Imagine a system of particles such as a fixed amount of an ideal gas in a container. The particles have kinetic energy and are colliding with each other and the walls of their container. A *given set of conditions* (P , V , and T) defines the **macrostate** (or state) of the system. The overall energy of a macrostate is constant as long as the conditions remain constant. However, the exact distribution of that energy is anything but constant.

At any one instant, a particular gas particle may have lots of kinetic energy, but at the next instant, it may have very little (because it lost its energy through collisions with other particles). We call the exact internal energy distribution among the particles at any one instant a **microstate**. We can think of a microstate as a snapshot of the system at a given instant in time. The next instant, the snapshot (the microstate) changes. However, the *macrostate*—defined by P , V , and T —remains constant. Many different microstates can give rise to a particular macrostate. In fact, the microstate (or snapshot) of a given macrostate is generally different from one moment to the next as the energy of the system constantly redistributes itself among the particles of the system.

The quantity, W , is the number of *possible* microstates that can result in a given macrostate. For example, suppose that we have two systems (call them System A and System B) and that each is composed of two particles (one blue and one red). Both systems have a total energy of 4 J, but System A has only one energy level and System B has two:



Each system has the same total energy (4 J), but System A has only one possible microstate (the red and the blue particles both occupying the 2 J energy level), while System B has a second possible microstate:



In this second microstate for System B, the blue particle has 3 J and the red one has 1 J (as opposed to System B's first microstate, where the energy of the particles is switched). This second microstate is not possible for System A because System A has only one energy level. For System A, $W = 1$, but for System B, $W = 2$. In other words, System B has more microstates in the same 4 J macrostate than System A. Since W is larger for System B than for System A, System B has greater *entropy*; it has more *energetically equivalent ways to arrange the components of the system*.

We can best understand entropy by turning our attention to energy for a moment. The entropy of a macrostate of a system increases with the number of *energetically equivalent* ways to arrange the components of the system to achieve that particular macrostate. This implies that *the state with the highest entropy also has the greatest dispersal of energy*. Returning to our previous example, we find that the energy of System B is dispersed over two energy levels instead of being confined to just one. At the heart of entropy, therefore, is the concept of energy dispersal or energy randomization. *A state in which a given amount of energy is more highly dispersed (or more highly randomized) has more entropy than a state in which the same energy is more highly concentrated.*

The Second Law of Thermodynamics

We have already alluded to the **second law of thermodynamics**, and now we can formally define it:

For any spontaneous process, the entropy of the universe increases ($\Delta S_{\text{univ}} > 0$).

The criterion for spontaneity is the entropy of the universe. Processes that increase the entropy of the universe—those that result in greater dispersal or randomization of energy—occur spontaneously. Processes that decrease the entropy of the universe do not occur spontaneously.

Entropy, like enthalpy, is a *state function*—its value depends only on the state of the system, not on how the system arrived at that state. Therefore, for any process, *the change in entropy is the entropy of the final state minus the entropy of the initial state*.

$$\Delta S = S_{\text{final}} - S_{\text{initial}}$$


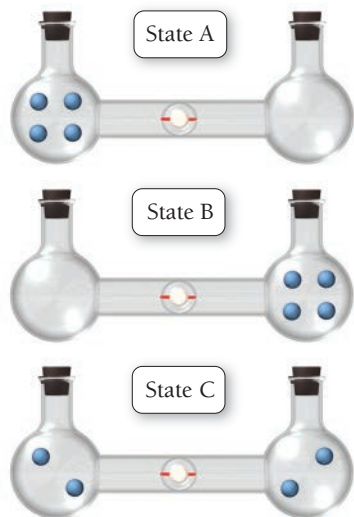
See the discussion of state functions in Section 9.3.

Entropy determines the direction of chemical and physical change. A chemical system proceeds in a direction that increases the entropy of the universe—it proceeds in a direction that has the largest number of energetically equivalent ways to arrange its components.

The Entropy Change upon the Expansion of an Ideal Gas

To better understand the second law, let us examine the expansion of an ideal gas into a vacuum (a spontaneous process with no associated change in enthalpy). Consider a flask containing an ideal gas that is connected to an evacuated flask by a tube equipped with a stopcock. When the stopcock is opened, the gas spontaneously expands into the evacuated flask. Since the gas is expanding into a vacuum, the pressure against which it expands is zero, and therefore the work ($w = -P_{\text{ext}}\Delta V$) is also zero (see Section 9.4).

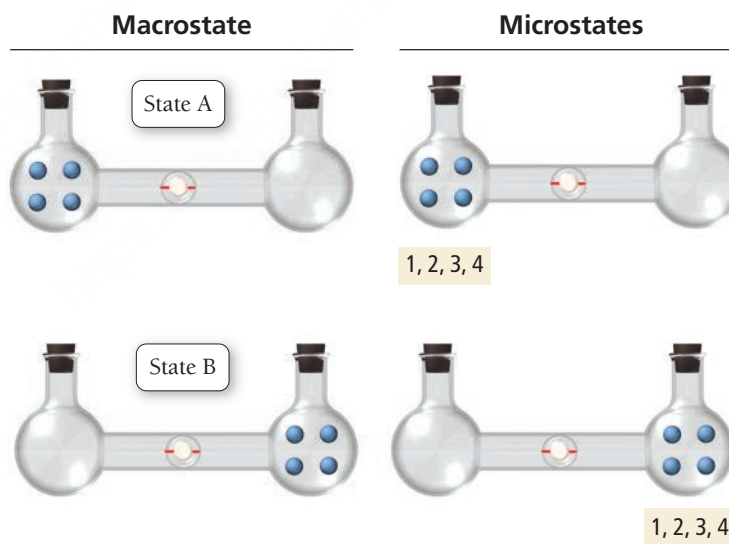
However, even though the total energy of the gas does not change during the expansion, the entropy does change. As an illustration, consider a simplified system containing only four gas atoms.



When the stopcock is opened, several possible energetically equivalent final states may result, each with the four atoms distributed in a different way. For example, there could be three atoms in the flask on the left and one in the flask on the right, or vice versa. For simplicity, we consider only the possibilities shown in the margin: state A, state B, and state C. Since the energy of any one atom is the same in either flask and the atoms do not interact, states A, B, and C are energetically equivalent.

Now we ask the following question for each state: How many microstates give rise to the same macrostate? To keep track of the microstates, we label the atoms 1–4. However, even though the atoms have different numbered labels, they are all identical. For states A and B, only one microstate results in the specified macrostate—atoms 1–4 on the left side or the right side, respectively.

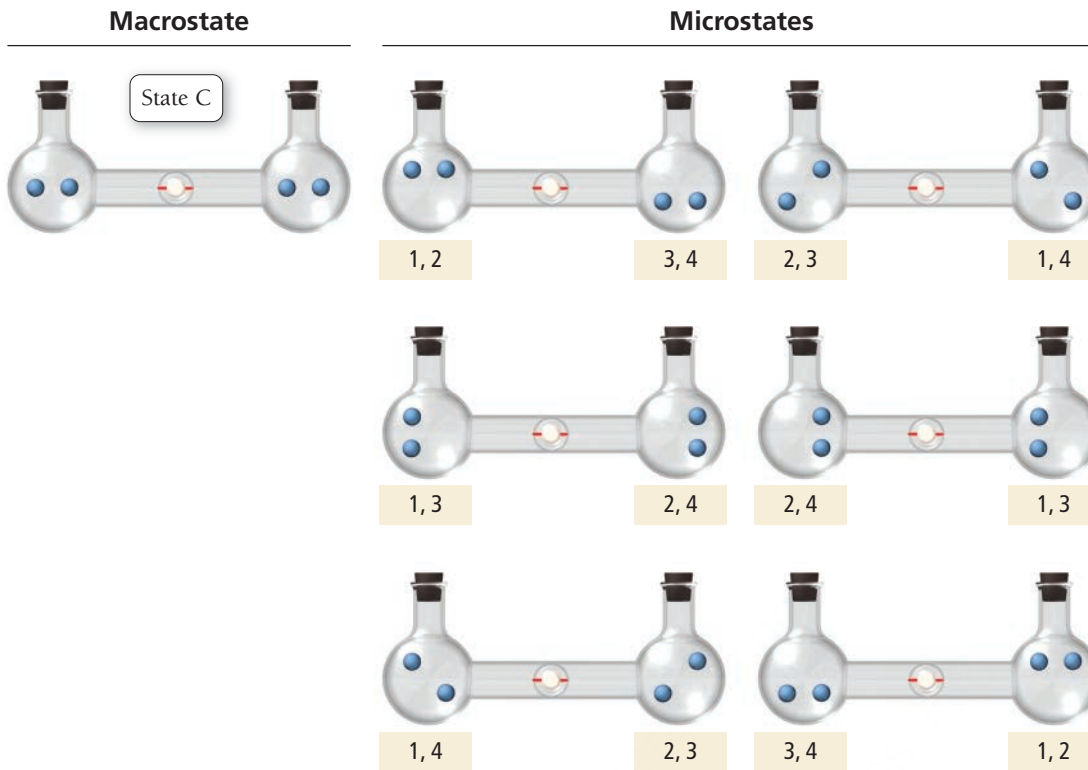
Other states, such as those in which three atoms are in one flask and one atom is in the other, are omitted here to simplify the discussion.



For state C, however, six different possible microstates all result in the same macrostate (two atoms on each side).

This means that the statistical probability of finding the atoms in state C is six times greater than the probability of finding the atoms in state A or state B. Consequently, even for a simple system consisting of only four atoms, the atoms are most likely to be found in state C. State C has the greatest entropy—it has the greatest number of energetically equivalent ways to distribute its components.

As the number of atoms increases, the number of microstates that leads to the atoms being equally distributed between the two flasks increases dramatically. For example, with 10 atoms, the number of



In these drawings, the exact location of an atom within a flask is insignificant. The significant aspect is whether the atom is in the left flask or the right flask.

microstates leading to an equal distribution of atoms between two flasks is 252 and with 20 atoms the number of microstates is 184,756. Yet, the number of microstates that leads to all of the atoms being only in the left flask (or all only in the right flask) does not increase—it is always only 1. In other words, the arrangement in which the atoms are equally distributed between the two flasks has a much larger number of possible microstates and therefore much greater entropy. The system thus tends toward that state.

The *change in entropy* in transitioning from a state in which all of the atoms are in the left flask to the state in which the atoms are evenly distributed between both flasks is *positive* because the final state has greater entropy than the initial state:

$$\Delta S = S_{\text{final}} - S_{\text{initial}}$$

↑

Entropy of state in which atoms are distributed between both flasks

↑

Entropy of state in which atoms are all in one flask

Since S_{final} is greater than S_{initial} , ΔS is positive and the process is spontaneous according to the second law. Notice that when the atoms are confined to one flask, their energy is also confined to that one flask; however, when the atoms are evenly distributed between both flasks, their energy is spread out over a greater volume. As the gas expands into the empty flask, energy is dispersed.

The second law explains many phenomena not explained by the first law of thermodynamics. In Section 9.4, we saw that heat travels from a substance at higher temperature (such as a hot cup of coffee) to one at lower temperature (such as the surrounding cooler air). Why? The first law of thermodynamics would not prohibit some heat from flowing the other way—from the surrounding cooler air into the hot cup of coffee. The surroundings could lose 100 J of heat (cooling even more), and the coffee could gain 100 J of heat (warming even more). The first law would not be violated by such a heat transfer. Imagine having your cup of coffee get warmer as it absorbed thermal energy from the surroundings! It will never happen because heat transfer from cold to hot violates the second law of thermodynamics. According to the second law, energy is dispersed, not concentrated. The transfer of heat from a substance of higher temperature to one of lower temperature results in greater energy randomization—the energy that was concentrated in the hot substance becomes dispersed into the surroundings. The second law accounts for this pervasive tendency.

For n particles, the number of ways to put r particles in one flask and $n - r$ particles in the other flask is $n! / [(n - r)! r!]$. For 10 atoms, $n = 10$ and $r = 5$.



▲ Thermal energy always travels from hot to cold.



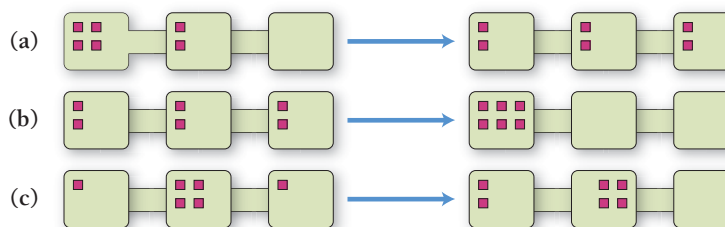
18.1

Cc

Conceptual
Connection

Entropy

Consider these three changes in the possible distributions of six gaseous particles within three interconnected boxes. Which change has a positive ΔS ?



KEY CONCEPT VIDEO
Standard Molar Entropies

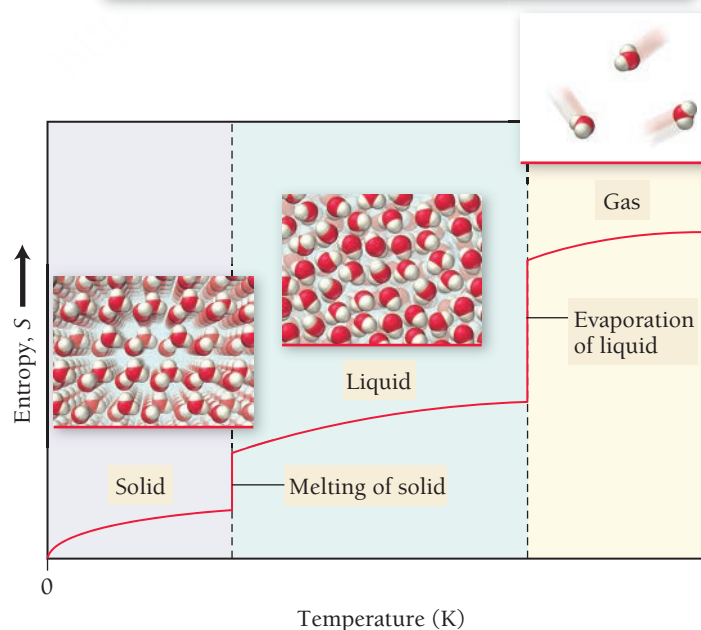
18.4 Entropy Changes Associated with State Changes

The entropy of a sample of matter *increases* as it changes state from a solid to a liquid or from a liquid to a gas (**Figure 18.2** ▼). We first consider this idea conceptually, and then we turn to actually calculating the value of ΔS for this change. Recall that, in Chapter 9, we distinguished between a thermodynamic system and its surroundings. This distinction is useful in our discussion of entropy. For a change of state in a substance, we consider the substance to be the system. The surroundings are then the rest of the universe. Here, we focus on the entropy of the *system* undergoing the change of state (not the surroundings, which we address in Section 18.5).

Entropy and State Change: The Concept

We can informally think of the increase in entropy in going from a solid to a gas or from a liquid to a gas by analogy with macroscopic disorder. The gaseous state is more disorderly than the liquid state, which is in turn more disorderly than the solid state. More formally, however, the differences in entropy are related to the number of energetically equivalent ways of arranging the particles in each state—there are more in the gas than in the liquid and more in the liquid than in the solid.

The entropy of a sample of matter *increases* as it changes state from a solid to a liquid or from a liquid to a gas.



► **FIGURE 18.2** Entropy and State Change

Additional “Places” for Energy

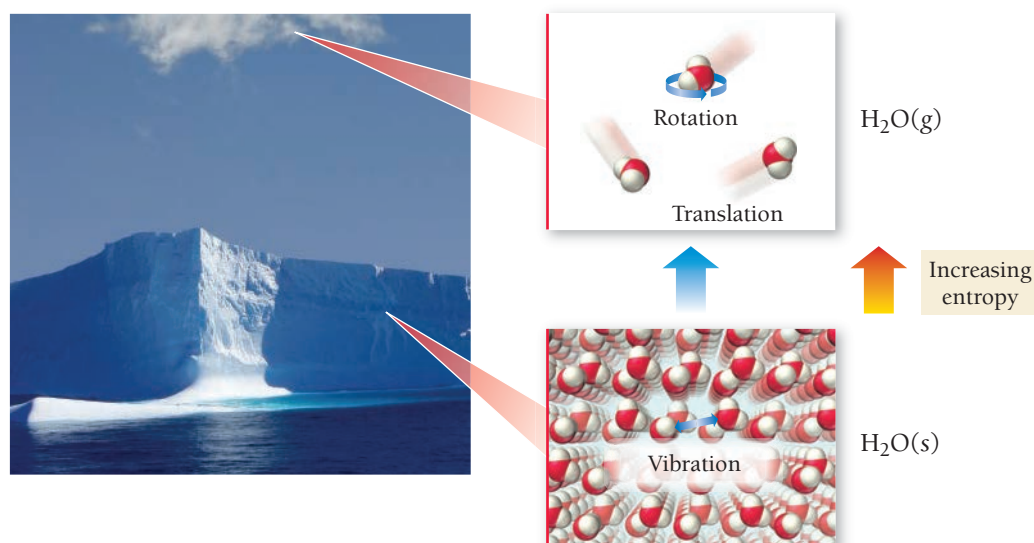


FIGURE 18.3 “Places” for Energy
In the solid state, energy is contained largely in the vibrations between molecules. In the gas state, energy can be contained in both the straight-line motion of molecules (translational energy) and the rotation of molecules (rotational energy).

A gas has more energetically equivalent configurations because it has more ways to distribute its energy than a solid. The energy in a molecular solid consists largely of the vibrations between its molecules. If the same substance is in its gaseous state, however, the energy can take the form of straight-line motions of the molecules (called translational energy) and rotations of the molecules (called rotational energy). In other words, when a solid sublimates into a gas, there are new “places” to put energy (**Figure 18.3** ▲). The gas thus has more possible microstates (more energetically equivalent configurations) than the solid and therefore a greater entropy.

We can now predict the sign of ΔS for processes involving changes of state (or phase). In general, entropy increases ($\Delta S > 0$) for each of the following:

- the phase transition from a solid to a liquid
- the phase transition from a solid to a gas
- the phase transition from a liquid to a gas
- an increase in the number of moles of a gas during a chemical reaction

EXAMPLE 18.1**Predicting the Sign of Entropy Change**

Predict the sign of ΔS for each process.

- $\text{H}_2\text{O}(g) \longrightarrow \text{H}_2\text{O}(l)$
- Solid carbon dioxide sublimates.
- $2 \text{N}_2\text{O}(g) \longrightarrow 2 \text{N}_2(g) + \text{O}_2(g)$

SOLUTION

- Because a gas has a greater entropy than a liquid, the entropy decreases and ΔS is negative.
- Because a solid has a lower entropy than a gas, the entropy increases and ΔS is positive.
- Because the number of moles of gas increases, the entropy increases and ΔS is positive.

FOR PRACTICE 18.1

Predict the sign of ΔS for each process.

- the boiling of water
- $\text{I}_2(g) \longrightarrow \text{I}_2(s)$
- $\text{CaCO}_3(s) \longrightarrow \text{CaO}(s) + \text{CO}_2(g)$

Entropy and State Changes: The Calculation

We have just seen how the entropy of a system increases with the transition from a solid to a liquid and from a liquid to a gas. We can calculate the actual changes in entropy that occur in the system during these state transitions. Recall from Sections 11.5 and 11.6 that a change in state is accompanied by an exchange of heat between the system and surroundings. For example, melting and vaporization are endothermic (they absorb heat from the surroundings), while fusion and condensation are exothermic (they give off heat to the surroundings).

The definition of entropy that we introduced in Section 18.3 ($S = k \ln W$) shows how entropy is related to the distribution of energy among the particles that compose matter. On a macroscopic scale, we can define the change in entropy that occurs when a system exchanges a quantity of heat (q) with its surroundings at a constant temperature (T) with the following equation:

$$\Delta S = \frac{q_{\text{rev}}}{T} \text{ (constant temperature)} \quad [18.1]$$

In this equation, ΔS is the entropy change of the system, q_{rev} is the heat exchanged with the surroundings in a *reversible* process (more on this to come), and T is the temperature in K. The temperature must be constant throughout the change—the process must be *isothermal*. Let's address two important concepts related to this equation, the units of entropy and reversible processes.

Units of Entropy In Section 18.3, we saw that the units of entropy are J/K. We can now better understand these units. Entropy is a measure of energy dispersal per unit temperature and therefore has the units of energy (J) over temperature (K). For example, when a substance melts (an endothermic process), it absorbs a certain amount of energy from the surroundings. That energy becomes dispersed into the system (as the substance changes state from a solid to a liquid) and the entropy of the substance increases. The change in entropy is related to the amount of energy the substance absorbs (units of J) divided by the temperature of the substance (units of K).

Reversible Processes A **reversible process** reverses direction upon an infinitesimally small change in some property. The melting of ice when the ice and its surroundings are both at exactly 0°C is an example of a reversible process. An infinitesimally small *removal* of heat reverses the melting and causes freezing instead. An infinitesimally small *addition* of heat causes the melting to resume. All reversible processes are in a constant state of equilibrium and represent highly idealized conditions. In contrast, the melting of ice that happens when we set an ice cube on a countertop at room temperature is *irreversible*. In this case, the countertop and the surrounding air are at 25.0°C and an infinitesimally small removal of heat does not reverse the melting.

We can use Equation 18.1 to calculate the change in the entropy of a system that undergoes a state change. For example, when ice melts at its melting point, the heat exchanged with the surroundings is ΔH_{fus} and the temperature is 273 K:

$$q_{\text{rev}} = \Delta H_{\text{fus}} = 6.02 \text{ kJ/mol}$$

$$T = 273 \text{ K}$$

We substitute these quantities into Equation 18.1 to determine the change in entropy of the system when 1 mol of ice melts at its melting point:

$$\begin{aligned} \Delta S &= \frac{q_{\text{rev}}}{T} \\ &= \frac{(1 \text{ mol}) \frac{6.02 \times 10^3 \text{ J}}{\text{mol}}}{273 \text{ K}} \\ &= 22.1 \text{ J/K} \end{aligned}$$

The value of ΔS is positive, as we would expect for a transition from solid to liquid.

EXAMPLE 18.2

Calculating ΔS for a Change of State

Calculate the change in entropy that occurs in the system when 25.0 g of water condenses from a gas to a liquid at the normal boiling point of water (100.0°C).

SOLUTION

Because the condensation is occurring at the boiling point of water and the temperature is constant, you can use Equation 18.1 to calculate the change in entropy of the system.	$\Delta S = \frac{q_{\text{rev}}}{T}$
Gather the necessary quantities. Look up the value of the enthalpy of vaporization for water at its boiling point in Table 11.7. The enthalpy of condensation is the same in value but opposite in sign. Calculate the temperature in K.	$\begin{aligned}\Delta H_{\text{vap}} &= 40.7 \text{ kJ/mol} \\ \Delta H_{\text{condensation}} &= -40.7 \text{ kJ/mol} \\ T(\text{K}) &= T(^{\circ}\text{C}) + 273.15 \\ &= 100.0 + 273.15 \\ &= 373.15 \text{ K}\end{aligned}$
Substitute into Equation 18.1 to calculate the change in entropy for the system.	$\begin{aligned}\Delta S &= \frac{q_{\text{rev}}}{T} \\ &= \frac{25.0 \text{ g} \times \frac{1 \text{ mol}}{18.02 \text{ g}} \times \left(\frac{-40.7 \times 10^3 \text{ J}}{\text{mol}} \right)}{373.15 \text{ K}} \\ &= -151 \text{ J/K}\end{aligned}$

CHECK The answer has the correct units for entropy (J/K). The answer is negative, as you would expect for the condensation of a gas to a liquid.

FOR PRACTICE 18.2

Calculate the change in entropy that occurs in the system when 10.0 g of acetone (C₃H₆O) vaporizes from a liquid to a gas at its normal boiling point (56.1°C).

18.5 Heat Transfer and Entropy Changes of the Surroundings

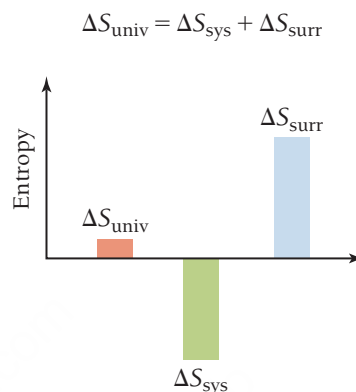
In Section 18.3, we observed that the criterion for spontaneity is an increase in the entropy of the universe. In Section 18.4, we saw how we can calculate the entropy change for a state change. But some of these state changes seem to happen spontaneously and correspond to a decrease in entropy. For example, when water freezes at temperatures below 0°C, the entropy of the water decreases, yet the process is spontaneous. Similarly, when water vapor in air condenses into fog on a cold night, the entropy of the water also decreases. Why are these processes spontaneous?

To answer this question, we must return to the second law: for any spontaneous process, the entropy of the universe increases ($\Delta S_{\text{univ}} > 0$). Even though the entropy of the water decreases during freezing and condensation, the entropy of the universe must somehow increase in order for these processes to be spontaneous. If we define the water as the system, then ΔS_{sys} is the entropy change for the water itself, ΔS_{surr} is the entropy change for the surroundings, and ΔS_{univ} is the entropy change for the universe. The entropy change for the universe is the sum of the entropy changes for the system and the surroundings:

$$\Delta S_{\text{univ}} = \Delta S_{\text{sys}} + \Delta S_{\text{surr}}$$

The second law states that the entropy of the universe must increase ($\Delta S_{\text{univ}} > 0$) for a process to be spontaneous. The entropy of the *system* can decrease ($\Delta S_{\text{sys}} < 0$) as long as the entropy of the *surroundings* increases by a greater amount ($\Delta S_{\text{surr}} > -\Delta S_{\text{sys}}$), so that the overall entropy of the *universe* undergoes a net increase.

For liquid water freezing or water vapor condensing, we know that the change in entropy for the system ΔS_{sys} is negative (because state changes from liquid to solid and from gas to liquid both result in less entropy). For ΔS_{univ} to be positive, therefore, ΔS_{surr} must be positive and greater in absolute value (or magnitude) than ΔS_{sys} , as shown graphically here:



Even though (as we saw earlier) enthalpy by itself cannot determine spontaneity, the increase in the entropy of the surroundings caused by the release of heat explains why exothermic processes are so *often* spontaneous.

But why does the freezing of ice or the condensation of water increase the entropy of the surroundings? Because both processes are *exothermic*: they give off heat to the surroundings. Because entropy is the dispersal or randomization of energy, *the release of heat energy by the system disperses that energy into the surroundings, increasing the entropy of the surroundings*. The freezing of water below 0°C and the condensation of water vapor on a cold night both increase the entropy of the universe because the heat given off to the surroundings increases the entropy of the surroundings to a sufficient degree to overcome the entropy decrease in the system.

Summarizing Entropy Changes in the Surroundings:

- An exothermic process increases the entropy of the surroundings.
- An endothermic process decreases the entropy of the surroundings.

The Temperature Dependence of ΔS_{surr}

We just discussed how the freezing of water increases the entropy of the surroundings by dispersing heat energy into the surroundings. Yet we know that the freezing of water is not spontaneous at all temperatures. The freezing of water becomes *nonspontaneous* above 0°C . Why? Because entropy represents the energy dispersed into a sample of matter *per unit temperature*—it has the units of joules per kelvin (J/K). The magnitude of the increase in entropy of the surroundings due to the dispersal of energy into the surroundings is *temperature dependent*.

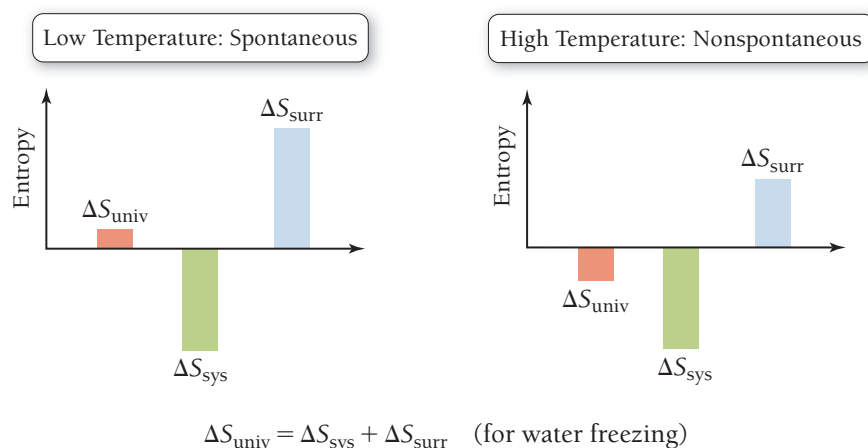
The greater the temperature, the smaller the increase in entropy for a given amount of energy dispersed into the surroundings. The higher the temperature, the lower the amount of entropy for a given amount of energy dispersed. You can understand the temperature dependence of entropy changes due to heat flow with a simple analogy. Imagine that you have \$1000 to give away. If you gave the \$1000 to a rich man, the impact on his net worth would be negligible (because he already has so much money). If you gave the same \$1000 to a poor man, however, his net worth would change substantially (because he has so little money). Similarly, if you disperse 1000 J of energy into surroundings that are hot, the entropy increase is small (because the impact of the 1000 J is small on surroundings that already contain a lot of energy). If you disperse the same 1000 J of energy into surroundings that are cold, however, the entropy increase is large (because the impact of the 1000 J is great on surroundings that contain little energy). For this same reason, the impact of the heat released to the surroundings by the freezing of water depends on the temperature of the surroundings—the higher the temperature, the smaller the impact.

We can now see why water spontaneously freezes at low temperature but not at high temperature. For the freezing of liquid water into ice, the change in entropy of the system is negative at all temperatures.

$$\Delta S_{\text{univ}} = \Delta S_{\text{sys}} + \Delta S_{\text{surr}}$$

Negative
Positive and large at low temperature
Positive and small at high temperature

At low temperatures, the decrease in entropy of the system is overcome by the large increase in the entropy of the surroundings (a positive quantity), resulting in a positive ΔS_{univ} and a spontaneous process. At high temperatures, on the other hand, the decrease in entropy of the system is not overcome by the increase in entropy of the surroundings (because the magnitude of the positive ΔS_{surr} is smaller at higher temperatures), resulting in a negative ΔS_{univ} ; therefore, the freezing of water is not spontaneous at high temperature as shown graphically here:



Quantifying Entropy Changes in the Surroundings

We have seen that when a system exchanges heat with the surroundings, it changes the entropy of the surroundings. In Section 18.4, we saw that, at constant temperature, we can use Equation 18.1 ($\Delta S = q_{\text{rev}}/T$) to quantify the entropy change in the system. We can use the same expression to quantify entropy changes in the surroundings. In other words, the change in entropy of the surroundings depends on: (1) the amount of heat transferred into or out of the surroundings; and (2) the temperature of the surroundings.

Since the surroundings are usually an infinitely large bath at constant temperature, the heat transferred into or out of that bath under conditions of constant pressure (where only PV work is allowed) is simply $-\Delta H_{\text{sys}}$. The negative sign reflects that, according to the first law of thermodynamics, any heat leaving the system must go into the surroundings and vice versa ($q_{\text{sys}} = -q_{\text{surr}}$). If we incorporate this idea into Equation 18.1, we get the following expression:

$$\Delta S_{\text{surr}} = \frac{-\Delta H_{\text{sys}}}{T} \text{ (constant } P, T) \quad [18.2]$$

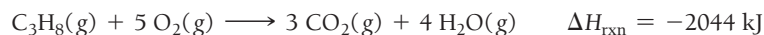
For any chemical or physical process occurring at constant temperature and pressure, the entropy change of the surroundings is equal to the heat dispersed into or out of the surroundings ($-\Delta H_{\text{sys}}$) divided by the temperature of the surroundings in kelvins. Notice that:

- A process that emits heat into the surroundings (ΔH_{sys} negative) *increases* the entropy of the surroundings (positive ΔS_{surr}).
- A process that absorbs heat from the surroundings (ΔH_{sys} positive) *decreases* the entropy of the surroundings (negative ΔS_{surr}).
- The magnitude of the change in entropy of the surroundings is proportional to the magnitude of ΔH_{sys} .

Equation 18.1 gives us insight into why exothermic processes have a tendency to be spontaneous at low temperatures—they increase the entropy of the surroundings. As temperature increases, however, a given negative $-\Delta H_{\text{sys}}$ produces a smaller positive ΔS_{surr} ; for this reason, exothermicity becomes less of a determining factor for spontaneity as temperature increases.

EXAMPLE 18.3**Calculating Entropy Changes in the Surroundings**

Consider the combustion of propane gas:



- Calculate the entropy change in the surroundings associated with this reaction occurring at 25 °C.
- Determine the sign of the entropy change for the system.
- Determine the sign of the entropy change for the universe. Is the reaction spontaneous?

SOLUTION

(a) The entropy change of the surroundings is given by Equation 18.2. Substitute the value of ΔH_{rxn} and the temperature in kelvins and calculate ΔS_{surr} .	$T = 273 + 25 = 298 \text{ K}$ $\Delta S_{\text{surr}} = \frac{-\Delta H_{\text{rxn}}}{T} = \frac{-(-2044 \text{ kJ})}{298 \text{ K}}$ $= +6.86 \text{ kJ/K}$ $= +6.86 \times 10^3 \text{ J/K}$
(b) Determine the number of moles of gas on each side of the reaction. An increase in the number of moles of gas implies a positive ΔS_{sys} .	$\text{C}_3\text{H}_8(\text{g}) + 5 \text{O}_2(\text{g}) \longrightarrow 3 \text{CO}_2(\text{g}) + 4 \text{H}_2\text{O}(\text{g})$ <div style="display: flex; justify-content: space-around; width: 100%;"> 6 mol gas 7 mol gas </div> <p>ΔS_{sys} is positive.</p>
(c) The change in entropy of the universe is the sum of the entropy changes of the system and the surroundings. If the entropy changes of the system and surroundings are both the same sign, the entropy change for the universe also has the same sign.	$\Delta S_{\text{univ}} = \Delta S_{\text{sys}} + \Delta S_{\text{surr}}$ <div style="display: flex; justify-content: center; align-items: center; margin: 10px 0;"> <div style="text-align: center; margin: 0 10px;"> \uparrow Positive </div> <div style="text-align: center; margin: 0 10px;"> \uparrow Positive </div> </div> <p>Therefore, ΔS_{univ} is positive and the reaction is spontaneous.</p>

FOR PRACTICE 18.3

Consider the reaction between nitrogen and oxygen gas to form dinitrogen monoxide:



- Calculate the entropy change in the surroundings associated with this reaction occurring at 25 °C.
- Determine the sign of the entropy change for the system.
- Determine the sign of the entropy change for the universe. Is the reaction spontaneous?

FOR MORE PRACTICE 18.3

A reaction has $\Delta H_{\text{rxn}} = -107 \text{ kJ}$ and $\Delta S_{\text{rxn}} = 285 \text{ J/K}$. At what temperature is the change in entropy for the reaction equal to the change in entropy for the surroundings?



Conceptual
Connection

Entropy and Biological Systems

Do biological systems contradict the second law of thermodynamics? By taking energy from their surroundings and synthesizing large, complex biological molecules, plants and animals tend to concentrate energy, not disperse it. How can this be so?

18.6 Gibbs Free Energy

Equation 18.2 establishes a relationship between the enthalpy change in a system and the entropy change in the surroundings. Recall that for any process the entropy change of the universe is the sum of the entropy change of the system and the entropy change of the surroundings:

$$\Delta S_{\text{univ}} = \Delta S_{\text{sys}} + \Delta S_{\text{surr}} \quad [18.3]$$

Recall also that ΔS_{univ} is the criterion for spontaneity. A positive ΔS_{univ} indicates a spontaneous process, and a negative ΔS_{univ} indicates a nonspontaneous process. In this section, we derive a new thermodynamic function called Gibbs free energy, which, like ΔS_{univ} , is a criterion for spontaneity. However, Gibbs free energy focuses entirely on the system.

Defining Gibbs Free Energy

Combining Equation 18.3 with Equation 18.2 gives us the following relationship at constant temperature and pressure:

$$\Delta S_{\text{univ}} = \Delta S_{\text{sys}} - \frac{\Delta H_{\text{sys}}}{T} \quad [18.4]$$

Using Equation 18.4, we can calculate ΔS_{univ} while focusing only on the *system*. If we multiply Equation 18.4 by $-T$, we arrive at the expression:

$$\begin{aligned} -T\Delta S_{\text{univ}} &= -T\Delta S_{\text{sys}} + T\frac{\Delta H_{\text{sys}}}{T} \\ &= \Delta H_{\text{sys}} - T\Delta S_{\text{sys}} \end{aligned} \quad [18.5]$$

If we drop the subscript *sys*—from now on ΔH and ΔS without subscripts mean ΔH_{sys} and ΔS_{sys} —we get the expression:

$$-T\Delta S_{\text{univ}} = \Delta H - T\Delta S \quad [18.6]$$

The right-hand side of Equation 18.6 represents the change in *Gibbs free energy*. The formal definition of **Gibbs free energy (G)** is:

$$G = H - TS \quad [18.7]$$

where H is enthalpy, T is the temperature in kelvins, and S is entropy. The *change* in Gibbs free energy, symbolized by ΔG , is expressed as follows (at constant temperature):

$$\Delta G = \Delta H - T\Delta S \quad [18.8]$$

If we combine Equations 18.6 and 18.8, we have an equation that makes clear the significance of ΔG :

$$\Delta G = -T\Delta S_{\text{univ}} \quad (\text{constant } T, P) \quad [18.9]$$

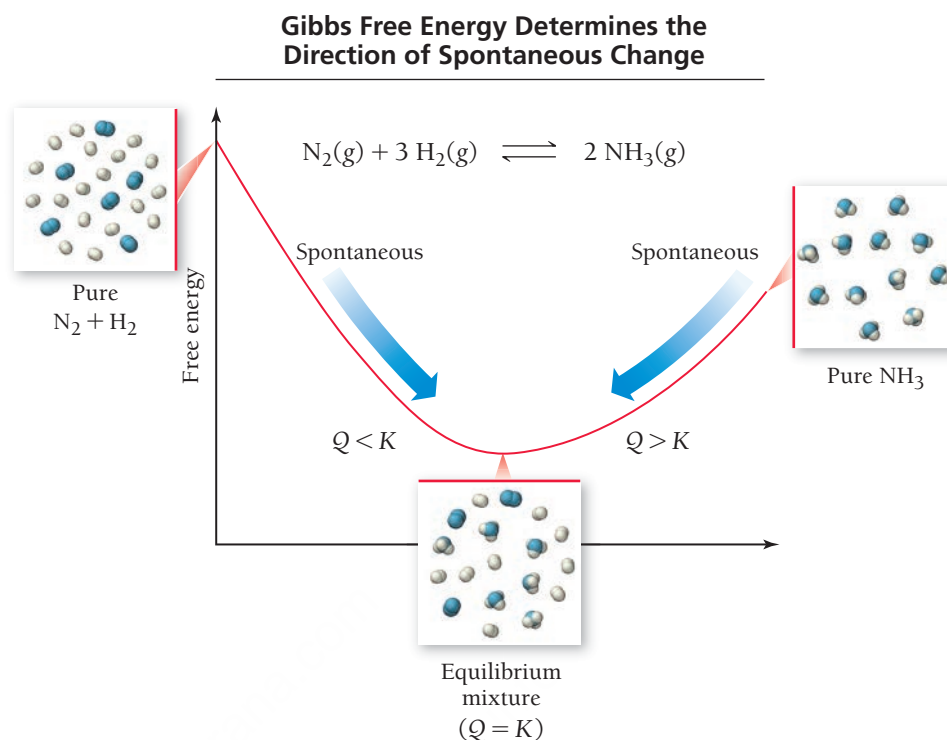
The change in Gibbs free energy for a process occurring at constant temperature and pressure is proportional to the negative of ΔS_{univ} . Since ΔS_{univ} is a criterion for spontaneity, ΔG is also a criterion for spontaneity (although opposite in sign). In fact, Gibbs free energy is also called *chemical potential* because it is analogous to mechanical potential energy discussed earlier. Just as mechanical systems tend toward lower potential energy, so chemical systems tend toward lower Gibbs free energy (toward lower chemical potential) (**Figure 18.4** ► on the next page).

Summarizing Gibbs Free Energy (at Constant Temperature and Pressure):

- ΔG is proportional to the negative of ΔS_{univ} .
- A decrease in Gibbs free energy ($\Delta G < 0$) corresponds to a spontaneous process.
- An increase in Gibbs free energy ($\Delta G > 0$) corresponds to a nonspontaneous process.

► **FIGURE 18.4 Gibbs Free Energy**

Gibbs free energy is also called chemical potential because it determines the direction of spontaneous change for chemical systems.



Notice that we can calculate changes in Gibbs free energy solely with reference to the system. So, to determine whether a process is spontaneous, we only have to find the change in *entropy* for the system (ΔS) and the change in *enthalpy* for the system (ΔH). We can then predict the spontaneity of the process at any temperature. In Chapter 9 we learned how to calculate changes in enthalpy (ΔH) for chemical reactions. In Section 18.7, we will learn how to calculate changes in entropy (ΔS) for chemical reactions. We can then use those two quantities to calculate changes in free energy (ΔG) for chemical reactions and predict their spontaneity. Before we move on to doing this, however, we examine some examples that demonstrate how ΔH , ΔS , and T affect the spontaneity of chemical processes.



KEY CONCEPT VIDEO
The Effect of ΔH , ΔS , and T on Reaction Spontaneity

The Effect of ΔH , ΔS , and T on Spontaneity

Case 1: ΔH Negative, ΔS Positive If a reaction is exothermic ($\Delta H < 0$), and if the change in entropy for the reaction is positive ($\Delta S > 0$), then the change in free energy is negative at all temperatures and the reaction is spontaneous at all temperatures.

$$\Delta G = \Delta H - T \Delta S$$

↑

Negative at all temperatures

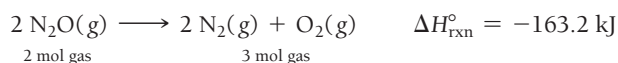
↑

Negative

↑

Positive

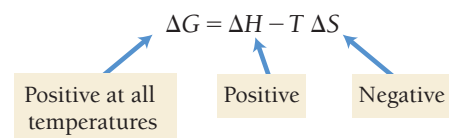
As an example, consider the dissociation of N_2O :



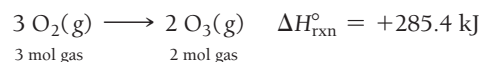
The change in *enthalpy* is negative—heat is emitted, increasing the entropy of the surroundings. The change in *entropy* for the reaction is positive, which means that the entropy of the system increases. (We can see that the change in entropy is positive from the balanced equation—the number of moles of gas increases.) Since the entropy of both the system and the surroundings increases, the entropy of the universe must also increase, making the reaction spontaneous at all temperatures.

Recall from Chapter 9 that ΔH° represents the standard enthalpy change. The definition of the standard state was first given in Section 9.10 and is restated in Section 18.7.

Case 2: ΔH Positive, ΔS Negative If a reaction is endothermic ($\Delta H > 0$), and if the change in entropy for the reaction is negative ($\Delta S < 0$), then the change in free energy is positive at all temperatures and the reaction is nonspontaneous at all temperatures.

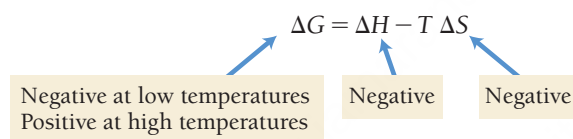


As an example, consider the formation of ozone from oxygen:

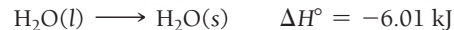


The change in *enthalpy* is positive—heat is therefore absorbed, *decreasing* the entropy of the surroundings. The change in *entropy* is negative, which means that the entropy of the system decreases. (We can see that the change in entropy is negative from the balanced equation—the number of moles of gas decreases.) Since the entropy of both the system and the surroundings decreases, the entropy of the universe must also decrease, making the reaction nonspontaneous at all temperatures.

Case 3: ΔH Negative, ΔS Negative If a reaction is exothermic ($\Delta H < 0$) and if the change in entropy for the reaction is negative ($\Delta S < 0$), then the sign of the change in free energy depends on temperature. The reaction is spontaneous at low temperature but nonspontaneous at high temperature.



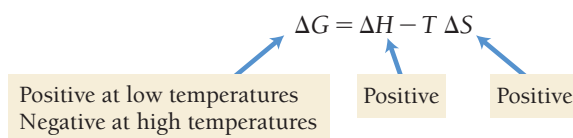
As an example, consider the freezing of liquid water to form ice:



The change in *enthalpy* is negative—heat is emitted, increasing the entropy of the surroundings. The change in *entropy* is negative, which means that the entropy of the system decreases. (We can see that the change in entropy is negative from the balanced equation—a liquid turns into a solid.)

Unlike the two previous cases, where the changes in *entropy* of the system and of the surroundings had the same sign, the changes here are opposite in sign. Therefore, the sign of the change in free energy depends on the relative magnitudes of the two changes. At a low enough temperature, the heat emitted into the surroundings causes a large entropy change in the surroundings, making the process spontaneous. At high temperature, the same amount of heat is dispersed into warmer surroundings, so the positive entropy change in the surroundings is smaller, resulting in a nonspontaneous process.

Case 4: ΔH Positive, ΔS Positive If a reaction is endothermic ($\Delta H > 0$), and if the change in entropy for the reaction is positive ($\Delta S > 0$), then the sign of the change in free energy again depends on temperature. The reaction is nonspontaneous at low temperature but spontaneous at high temperature.



As an example, consider the vaporizing of liquid water to gaseous water:



The change in *enthalpy* is positive—heat is absorbed from the surroundings, so the entropy of the surroundings decreases. The change in *entropy* is positive, which means that the entropy of the system increases. (We can see that the change in entropy is positive from the balanced equation—a liquid turns into a gas.) The changes in entropy of the system and the surroundings again have opposite signs, only this time the entropy of the surroundings decreases while the entropy of the system increases. In cases

such as this, high temperature favors spontaneity because the absorption of heat from the surroundings has less effect on the entropy of the surroundings as temperature increases.

The results of this section are summarized in Table 18.1. Notice that when ΔH and ΔS have opposite signs, the spontaneity of the reaction does not depend on temperature. *When ΔH and ΔS have the same sign, however, the spontaneity does depend on temperature.* The temperature at which the reaction changes from being spontaneous to being nonspontaneous (or vice versa) is the temperature at which ΔG changes sign, which we can determine by setting $\Delta G = 0$ and solving for T , as shown in part b of Example 18.4.

TABLE 18.1 The Effect of ΔH , ΔS , and T on Spontaneity

ΔH	ΔS	Low Temperature	High Temperature	Example
−	+	Spontaneous ($\Delta G < 0$)	Spontaneous ($\Delta G < 0$)	$2 \text{ N}_2\text{O}(g) \longrightarrow 2 \text{ N}_2(g) + \text{O}_2(g)$
+	−	Nonspontaneous ($\Delta G > 0$)	Nonspontaneous ($\Delta G > 0$)	$3 \text{ O}_2(g) \longrightarrow 2 \text{ O}_3(g)$
−	−	Spontaneous ($\Delta G < 0$)	Nonspontaneous ($\Delta G > 0$)	$\text{H}_2\text{O}(l) \longrightarrow \text{H}_2\text{O}(s)$
+	+	Nonspontaneous ($\Delta G > 0$)	Spontaneous ($\Delta G < 0$)	$\text{H}_2\text{O}(l) \longrightarrow \text{H}_2\text{O}(g)$

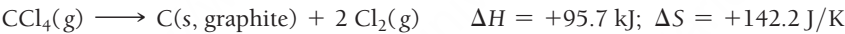
EXAMPLE 18.4

Interactive
Worked Example
Video 18.4

PEARSON
eText
2.0

Calculating Gibbs Free Energy Changes and Predicting Spontaneity from ΔH and ΔS

Consider the reaction for the decomposition of carbon tetrachloride gas:



- (a) Calculate ΔG at 25°C and determine whether the reaction is spontaneous.
- (b) If the reaction is not spontaneous at 25°C, determine at what temperature (if any) the reaction becomes spontaneous.

SOLUTION

- (a) Use Equation 18.8 to calculate ΔG from the given values of ΔH and ΔS . The temperature must be in kelvins. *Be sure to express both ΔH and ΔS in the same units (usually joules).*

$$\begin{aligned} T &= 273 + 25 = 298 \text{ K} \\ \Delta G &= \Delta H - T\Delta S \\ &= 95.7 \times 10^3 \text{ J} - (298 \text{ K})142.2 \text{ J/K} \\ &= 95.7 \times 10^3 \text{ J} - 42.4 \times 10^3 \text{ J} \\ &= +53.3 \times 10^3 \text{ J} \end{aligned}$$


The reaction is not spontaneous.

- (b) Since ΔS is positive, ΔG becomes more negative with increasing temperature. To determine the temperature at which the reaction becomes spontaneous, use Equation 18.8 to find the temperature at which ΔG changes from positive to negative (set $\Delta G = 0$ and solve for T). The reaction is spontaneous above this temperature.

$$\begin{aligned} \Delta G &= \Delta H - T\Delta S \\ 0 &= 95.7 \times 10^3 \text{ J} - (T)142.2 \text{ J/K} \\ T &= \frac{95.7 \times 10^3 \text{ J}}{142.2 \text{ J/K}} \\ &= 673 \text{ K} \end{aligned}$$

FOR PRACTICE 18.4

Consider the reaction:



Calculate ΔG at 25°C and determine whether the reaction is spontaneous. Does ΔG become more negative or more positive as the temperature increases?

ΔH , ΔS , and ΔG

18.3

Cc

Conceptual
Connection

Which statement is true regarding the sublimation of dry ice (solid CO_2)?

- (a) ΔH is positive, ΔS is positive, and ΔG is positive at low temperature and negative at high temperature.
- (b) ΔH is negative, ΔS is negative, and ΔG is negative at low temperature and positive at high temperature.
- (c) ΔH is negative, ΔS is positive, and ΔG is negative at all temperatures.
- (d) ΔH is positive, ΔS is negative, and ΔG is positive at all temperatures.

18.7 Entropy Changes in Chemical Reactions: Calculating $\Delta S^\circ_{\text{rxn}}$

We now turn our attention to predicting and quantifying entropy and entropy changes in a sample of matter. As we examine this topic, we again encounter the theme of this book: *Structure determines properties*. In this case, the property we are interested in is entropy. In this section, we see how the structure of the particles that compose a particular sample of matter determines the entropy that the sample possesses at a given temperature and pressure.

Defining Standard States and Standard Entropy Changes

In Chapter 9, we learned how to calculate standard changes in enthalpy ($\Delta H^\circ_{\text{rxn}}$) for chemical reactions. We now turn to calculating standard changes in *entropy* for chemical reactions. Recall from Section 9.10 that the standard enthalpy change for a reaction ($\Delta H^\circ_{\text{rxn}}$) is the change in enthalpy for a process in which all reactants and products are in their standard states. Recall also the definitions of the standard state:

- *For a gas:* The standard state for a gas is the pure gas at a pressure of exactly 1 atm.
- *For a liquid or solid:* The standard state for a liquid or solid is the pure substance in its most stable form at a pressure of 1 atm and at the temperature of interest (often taken to be 25°C).
- *For a substance in solution:* The standard state for a substance in solution is a concentration of 1 M.

We define the **standard entropy change for a reaction** ($\Delta S^\circ_{\text{rxn}}$) as the change in *entropy* for a process in which all reactants and products are in their standard states. Since entropy is a function of state, the standard change in entropy is the standard entropy of the products minus the standard entropy of the reactants:

$$\Delta S^\circ_{\text{rxn}} = S^\circ_{\text{products}} - S^\circ_{\text{reactants}}$$

But how do we determine the standard entropies of the reactants and products? Theoretically, we could use Boltzmann's definition ($S = k \ln W$); however, practically we rely on tables that come from experimental measurements. Recall from Chapter 9 that we defined *standard molar enthalpies of formation* (ΔH°_f) to use in calculating $\Delta H^\circ_{\text{rxn}}$. In this chapter, we define **standard molar entropies** (S°) to use in calculating $\Delta S^\circ_{\text{rxn}}$.


Standard Molar Entropies (S°) and the Third Law of Thermodynamics

Recall that in Chapter 9 we defined a *relative zero* for enthalpy. To do this, we assigned a value of zero to the standard enthalpy of formation for an element in its standard state. This was necessary because absolute values of enthalpy cannot be determined. In other words, for enthalpy, there is no absolute zero against which to measure all other values; therefore, we always have to rely on enthalpy changes from an arbitrarily assigned standard (the elements in their standard states and most stable forms). For entropy, however, *there is an absolute zero*. The absolute zero of entropy is established by the **third law of thermodynamics**, which states:

The entropy of a perfect crystal at absolute zero (0 K) is zero.

The standard state has recently been changed to a pressure of 1 bar, which is very close to 1 atm (1 atm = 1.013 bar). Both standards are now in common use.

Perfect crystal at 0 K
 $W = 1$ $S = 0$



A perfect crystal at 0 K has only one possible way to arrange its components.

▲ FIGURE 18.5 Zero Entropy

Some elements exist in two or more forms, called *allotropes*, within the same state.

A perfect crystal at a temperature of absolute zero has only one possible way ($W = 1$) to arrange its components (**Figure 18.5** ◀). Based on Boltzmann’s definition of entropy ($S = k \ln W$), its entropy is zero ($S = k \ln 1 = 0$).

We can measure all entropy values against the absolute zero of entropy as defined by the third law. Table 18.2 lists values of standard entropies at 25°C for selected substances. A more complete list can be found in Appendix IIB. Standard entropy values are listed per mole of substance, in units of joules per mole per kelvin ($\text{J/mol} \cdot \text{K}$). The values are listed per mole because *entropy is an extensive property*—it depends on the amount of the substance.

At 25°C the standard entropy of any substance is the energy dispersed into one mole of that substance at 25°C, which depends on the number of “places” to put energy within the substance. The number of “places” to put energy depends on the structure of the substance. In particular, the state of the substance, the molar mass of the substance, the particular allotrope, the molecular complexity of the substance, and its extent of dissolution each affect the entropy contained in the substance (at a given temperature). Let’s examine each of these separately.

TABLE 18.2 Standard Molar Entropy Values (S°) for Selected Substances at 298 K





Substance	$S^\circ (\text{J/mol} \cdot \text{K})$	Substance	$S^\circ (\text{J/mol} \cdot \text{K})$	Substance	$S^\circ (\text{J/mol} \cdot \text{K})$
Gases		Liquids		Solids	
$\text{H}_2(g)$	130.7	$\text{H}_2\text{O}(l)$	70.0	$\text{MgO}(s)$	27.0
$\text{Ar}(g)$	154.8	$\text{CH}_3\text{OH}(l)$	126.8	$\text{Fe}(s)$	27.3
$\text{CH}_4(g)$	186.3	$\text{Br}_2(l)$	152.2	$\text{Li}(s)$	29.1
$\text{H}_2\text{O}(g)$	188.8	$\text{C}_6\text{H}_6(l)$	173.4	$\text{Cu}(s)$	33.2
$\text{N}_2(g)$	191.6			$\text{Na}(s)$	51.3
$\text{NH}_3(g)$	192.8			$\text{K}(s)$	64.7
$\text{F}_2(g)$	202.8			$\text{NaCl}(s)$	72.1
$\text{O}_2(g)$	205.2			$\text{CaCO}_3(s)$	91.7
$\text{Cl}_2(g)$	223.1			$\text{FeCl}_3(s)$	142.3
$\text{C}_2\text{H}_4(g)$	219.3				

Relative Standard Entropies: States of Matter As we saw earlier in Section 18.3, the entropy of a gas is generally greater than the entropy of a liquid, which is in turn greater than the entropy of a solid. We can see these trends in the tabulated values of standard entropies. For example, consider the relative standard entropies of liquid water and gaseous water at 25°C:

	$S^\circ (\text{J/mol} \cdot \text{K})$
$\text{H}_2\text{O}(l)$	70.0
$\text{H}_2\text{O}(g)$	188.8

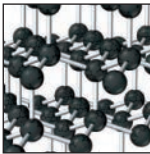

Gaseous water has a much greater standard entropy than liquid water because a gas has more energetically equivalent ways to arrange its components, which in turn results in greater energy dispersal at 25°C.

Relative Standard Entropies: Molar Masses Consider the standard entropies of the noble gases at 25°C:

S° (J/mol · K)		
He(g)	126.2	
Ne(g)	146.1	
Ar(g)	154.8	
Kr(g)	163.8	
Xe(g)	169.4	

The more massive the noble gas, the greater its entropy at 25°C. A complete explanation of why entropy increases with increasing molar mass is beyond the scope of this book. Briefly, the energy states associated with the motion of heavy atoms are more closely spaced than those of lighter atoms. The more closely spaced energy states allow for greater dispersal of energy at a given temperature and therefore greater entropy. This trend holds only for elements in the same physical state. (The effect of a physical state change—from a liquid to a gas, for example—is far greater than the effect of molar mass.)

Relative Standard Entropies: Allotropes Recall from Chapter 12 that some elements can exist in two or more forms with different structures—called **allotropes**—in the same state of matter. For example, the allotropes of carbon include diamond and graphite—both solid forms of carbon. Since the arrangement of atoms within these forms is different, their standard molar entropies are different:

S° (J/mol · K)		
C(s, diamond)	2.4	
C(s, graphite)	5.7	

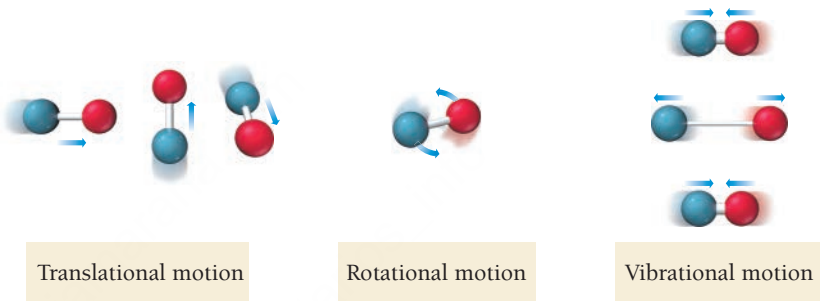
In diamond, the atoms are constrained by chemical bonds in a highly restricted three-dimensional crystal structure. In graphite, the atoms bond together in sheets, but the sheets have freedom to slide past each other. The less constrained structure of graphite results in more “places” to put energy and therefore greater entropy compared to diamond.

Relative Standard Entropies: Molecular Complexity For a given state of matter, entropy generally increases with increasing molecular complexity. For example, consider the standard entropies of gaseous argon and nitrogen monoxide:

	Molar Mass (g/mol)	S° (J/mol · K)
Ar(g)	39.948	154.8
NO(g)	30.006	210.8

Ar has a greater molar mass than NO, yet it has less entropy at 25°C. Why? Molecules generally have more “places” to put energy than do atoms. In a gaseous sample of argon, the only form that energy can take is the translational motion of the atoms. In a gaseous sample of NO, on the other hand, energy can take the form of translational motion, rotational motion, and (at high enough temperatures) vibrational motions of the molecules (**Figure 18.6** ▼). Therefore, for a given state, molecules generally have a greater entropy than free atoms.

FIGURE 18.6 “Places” for Energy in Gaseous NO Energy can be contained in translational motion, rotational motion, and (at high enough temperatures) vibrational motion.



Similarly, more complex molecules generally have more entropy than simpler ones. For example, consider the standard entropies of carbon monoxide and ethene gas:

	Molar Mass (g/mol)	S° (J/mol · K)
CO(g)	28.01	197.7
C ₂ H ₄ (g)	28.05	219.3

These two substances have nearly the same molar mass, but the greater complexity of C₂H₄ results in a greater molar entropy.

When molecular complexity and molar mass both increase (as is often the case), molar entropy also increases, as demonstrated by the oxides of nitrogen:

	S° (J/mol · K)
NO(g)	210.8
NO ₂ (g)	240.1
N ₂ O ₄ (g)	304.4

The increasing molecular complexity as we move down this list, as well as the increasing molar mass, results in more “places” to put energy and therefore greater entropy.

Relative Standard Entropies: Dissolution The dissolution of a crystalline solid into solution usually results in an increase in entropy. For example, consider the standard entropies of solid and aqueous potassium chlorate:

	S° (J/mol · K)
KClO ₃ (s)	143.1
KClO ₃ (aq)	265.7

The standard entropies for aqueous solutions are for the solution in its standard state, which is defined as having a concentration of 1 M.

When solid potassium chlorate dissolves in water, the thermal energy that was concentrated within the crystal becomes dispersed throughout the entire solution. The greater energy dispersal results in greater entropy.

Standard Entropies

Arrange these gases in order of increasing standard molar entropy: SO_3 , Kr, Cl_2 .

18.4

Cc

Conceptual
Connection

Calculating the Standard Entropy Change ($\Delta S^\circ_{\text{rxn}}$) for a Reaction

Since entropy is a state function and since standard entropies for many common substances are tabulated, we can calculate the standard entropy change for a chemical reaction by calculating the difference in entropy between the products and the reactants. More specifically:

To calculate $\Delta S^\circ_{\text{rxn}}$, subtract the standard entropies of the reactants multiplied by their stoichiometric coefficients from the standard entropies of the products multiplied by their stoichiometric coefficients. In the form of an equation:

$$\Delta S^\circ_{\text{rxn}} = \sum n_p S^\circ(\text{products}) - \sum n_r S^\circ(\text{reactants}) \quad [18.10]$$

In Equation 18.10, n_p represents the stoichiometric coefficients of the products, n_r represents the stoichiometric coefficients of the reactants, and S° represents the standard entropies. Keep in mind when using this equation that, *unlike enthalpies of formation, which are zero for elements in their standard states, standard entropies are always nonzero at 25°C*. Example 18.5 demonstrates the application of Equation 18.10.

EXAMPLE 18.5

Calculating Standard Entropy Changes ($\Delta S^\circ_{\text{rxn}}$)

Interactive
Worked Example
Video 18.5



Calculate $\Delta S^\circ_{\text{rxn}}$ for this balanced chemical equation.



SOLUTION

Begin by looking up the standard entropy for each reactant and product in Appendix IIB. Always note the correct state—(g), (l), (aq), or (s)—for each reactant and product.

Reactant or product	S° (J/mol · K)
$\text{NH}_3(g)$	192.8
$\text{O}_2(g)$	205.2
$\text{NO}(g)$	210.8
$\text{H}_2\text{O}(g)$	188.8


Calculate $\Delta S^\circ_{\text{rxn}}$ by substituting the appropriate values into Equation 18.10. Remember to include the stoichiometric coefficients in your calculation. (The units of S° become J/K when multiplied by the stoichiometric coefficients in moles.)

$$\begin{aligned} \Delta S^\circ_{\text{rxn}} &= \sum n_p S^\circ(\text{products}) - \sum n_r S^\circ(\text{reactants}) \\ &= [4(S^\circ_{\text{NO}(g)}) + 6(S^\circ_{\text{H}_2\text{O}(g)})] - [4(S^\circ_{\text{NH}_3(g)}) + 5(S^\circ_{\text{O}_2(g)})] \\ &= [4(210.8 \text{ J/K}) + 6(188.8 \text{ J/K})] - [4(192.8 \text{ J/K}) + 5(205.2 \text{ J/K})] \\ &= 1976.0 \text{ J/K} - 1797.2 \text{ J/K} \\ &= 178.8 \text{ J/K} \end{aligned}$$

CHECK Notice that $\Delta S^\circ_{\text{rxn}}$ is positive, as you would expect for a reaction in which the number of moles of gas increases.

FOR PRACTICE 18.5

Calculate $\Delta S^\circ_{\text{rxn}}$ for this balanced chemical equation.



18.8 Free Energy Changes in Chemical Reactions: Calculating $\Delta G^\circ_{\text{rxn}}$

Standard conditions represent a very specific reaction mixture. For a reaction mixture with reactants and products in their standard states, $Q = 1$.

In Section 18.6, we saw that the criterion for spontaneity is the change in Gibbs free energy (ΔG). When the reactants and products of a reaction are in their standard states, Gibbs free energy becomes the **standard change in free energy** ($\Delta G^\circ_{\text{rxn}}$). In this section, we examine three methods to calculate the standard change in free energy for a reaction ($\Delta G^\circ_{\text{rxn}}$). In the first method, we calculate $\Delta H^\circ_{\text{rxn}}$ and $\Delta S^\circ_{\text{rxn}}$ from tabulated values of $\Delta H^\circ_{\text{rxn}}$ and S° , and then use the relationship $\Delta G^\circ_{\text{rxn}} = \Delta H^\circ_{\text{rxn}} - T\Delta S^\circ_{\text{rxn}}$ to calculate $\Delta G^\circ_{\text{rxn}}$. In the second method, we use tabulated values of free energies of formation to calculate $\Delta G^\circ_{\text{rxn}}$ directly. In the third method, we determine the free energy change for a stepwise reaction from the free energy changes of each step. At the end of this section, we discuss how to make a nonspontaneous process spontaneous and what is “free” about free energy. Remember that $\Delta G^\circ_{\text{rxn}}$ is extremely useful because it tells us about the spontaneity of a process at standard conditions. The more negative $\Delta G^\circ_{\text{rxn}}$ is, the more spontaneous the process—the further it will go toward products to reach equilibrium.

Calculating Standard Free Energy Changes with $\Delta G^\circ_{\text{rxn}} = \Delta H^\circ_{\text{rxn}} - T\Delta S^\circ_{\text{rxn}}$

In Chapter 9 (Section 9.10), we learned how to use tabulated values of standard enthalpies of formation to calculate $\Delta H^\circ_{\text{rxn}}$. In Section 18.7, we learned how to use tabulated values of standard entropies to calculate $\Delta S^\circ_{\text{rxn}}$. We can use these calculated values of $\Delta H^\circ_{\text{rxn}}$ and $\Delta S^\circ_{\text{rxn}}$ to determine the standard free energy change for a reaction by using the equation:

$$\Delta G^\circ_{\text{rxn}} = \Delta H^\circ_{\text{rxn}} - T\Delta S^\circ_{\text{rxn}} \quad [18.11]$$

Because tabulated values of standard enthalpies of formation (ΔH°_f) and standard entropies (S°) are usually applicable at 25°C, the equation should (strictly speaking) be valid only when $T = 298 \text{ K}$ (25°C). However, the changes in $\Delta H^\circ_{\text{rxn}}$ and $\Delta S^\circ_{\text{rxn}}$ over a limited temperature range are small when compared to the changes in the value of the temperature itself. Therefore, we can use Equation 18.11 to estimate changes in free energy at temperatures other than 25°C.

EXAMPLE 18.6

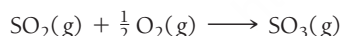
Calculating the Standard Change in Free Energy for a Reaction Using

$$\Delta G^\circ_{\text{rxn}} = \Delta H^\circ_{\text{rxn}} - T\Delta S^\circ_{\text{rxn}}$$

Interactive
Worked Example
Video 18.6

PEARSON
eText
2.0

One possible initial step in the formation of acid rain is the oxidation of the pollutant SO_2 to SO_3 by the reaction:



Calculate $\Delta G^\circ_{\text{rxn}}$ at 25°C and determine whether the reaction is spontaneous.

SOLUTION

Begin by looking up (in Appendix IIB) the standard enthalpy of formation and the standard entropy for each reactant and product.

Reactant or product	ΔH°_f (kJ/mol)	S° (J/mol · K)
$\text{SO}_2(g)$	−296.8	248.2
$\text{O}_2(g)$	0	205.2
$\text{SO}_3(g)$	−395.7	256.8

Calculate $\Delta H^\circ_{\text{rxn}}$ using Equation 9.14.

$$\begin{aligned} \Delta H^\circ_{\text{rxn}} &= \sum n_p \Delta H^\circ_f (\text{products}) - \sum n_r \Delta H^\circ_f (\text{reactants}) \\ &= [\Delta H^\circ_{f, \text{SO}_3(g)}] - [\Delta H^\circ_{f, \text{SO}_2(g)} + \frac{1}{2}(\Delta H^\circ_{f, \text{O}_2(g)})] \\ &= -395.7 \text{ kJ} - (-296.8 \text{ kJ} + 0.0 \text{ kJ}) \\ &= -98.9 \text{ kJ} \end{aligned}$$

Calculate $\Delta S^\circ_{\text{rxn}}$ using Equation 18.1.	$\Delta S^\circ_{\text{rxn}} = \sum n_p S^\circ(\text{products}) - \sum n_r S^\circ(\text{reactants})$ $= [S^\circ_{\text{SO}_3(\text{g})}] - [S^\circ_{\text{SO}_2(\text{g})} + \frac{1}{2}(S^\circ_{\text{O}_2(\text{g})})]$ $= 256.8 \text{ J/K} - [248.2 \text{ J/K} + \frac{1}{2}(205.2 \text{ J/K})]$ $= -94.0 \text{ J/K}$
Calculate $\Delta G^\circ_{\text{rxn}}$ using the calculated values of $\Delta H^\circ_{\text{rxn}}$ and $\Delta S^\circ_{\text{rxn}}$ and Equation 18.11. Convert the temperature to kelvins.	$T = 25 + 273 = 298 \text{ K}$ $\Delta G^\circ_{\text{rxn}} = \Delta H^\circ_{\text{rxn}} - T\Delta S^\circ_{\text{rxn}}$ $= -98.9 \times 10^3 \text{ J} - 298 \text{ K}(-94.0 \text{ J/K})$ $= -70.9 \times 10^3 \text{ J}$ $= -70.9 \text{ kJ}$ <p>The reaction is spontaneous at this temperature because $\Delta G^\circ_{\text{rxn}}$ is negative.</p>

FOR PRACTICE 18.6
 Consider the oxidation of NO to NO₂:

$$\text{NO}(\text{g}) + \frac{1}{2} \text{O}_2(\text{g}) \longrightarrow \text{NO}_2(\text{g})$$

 Calculate $\Delta G^\circ_{\text{rxn}}$ at 25°C and determine whether the reaction is spontaneous at standard conditions.

EXAMPLE 18.7
Estimating the Standard Change in Free Energy for a Reaction at a Temperature Other Than 25 °C Using $\Delta G^\circ_{\text{rxn}} = \Delta H^\circ_{\text{rxn}} - T\Delta S^\circ_{\text{rxn}}$

For the reaction in Example 18.5, estimate the value of $\Delta G^\circ_{\text{rxn}}$ at 125°C. Is the reaction more or less spontaneous at this elevated temperature; that is, is the value of $\Delta G^\circ_{\text{rxn}}$ more negative (more spontaneous) or more positive (less spontaneous)?

SOLUTION

Estimate $\Delta G^\circ_{\text{rxn}}$ at the new temperature using the calculated values of $\Delta H^\circ_{\text{rxn}}$ and $\Delta S^\circ_{\text{rxn}}$ from Example 18.5. For T, convert the given temperature to kelvins. Make sure to use the same units for $\Delta H^\circ_{\text{rxn}}$ and $\Delta S^\circ_{\text{rxn}}$ (usually joules).	$T = 125 + 273 = 398 \text{ K}$ $\Delta G^\circ_{\text{rxn}} = \Delta H^\circ_{\text{rxn}} - T\Delta S^\circ_{\text{rxn}}$ $= -98.9 \times 10^3 \text{ J} - 398 \text{ K}(-94.0 \text{ J/K})$ $= -61.5 \times 10^3 \text{ J}$ $= -61.5 \text{ kJ}$ <p>Since the value of $\Delta G^\circ_{\text{rxn}}$ at this elevated temperature is less negative (or more positive) than the value of $\Delta G^\circ_{\text{rxn}}$ at 25°C (which is -70.9 kJ), the reaction is less spontaneous.</p>
--	--

FOR PRACTICE 18.7

For the reaction in For Practice 18.5, calculate the value of $\Delta G^\circ_{\text{rxn}}$ at -55°C. Is the reaction more spontaneous (more negative $\Delta G^\circ_{\text{rxn}}$) or less spontaneous (more positive $\Delta G^\circ_{\text{rxn}}$) at the lower temperature?

Calculating $\Delta G^\circ_{\text{rxn}}$ with Tabulated Values of Free Energies of Formation

Because $\Delta G^\circ_{\text{rxn}}$ is the *change* in free energy for a chemical reaction—the difference in free energy between the products and the reactants—and because free energy is a state function, we can calculate $\Delta G^\circ_{\text{rxn}}$ by subtracting the free energies of the reactants of the reaction from the free energies of the products. Also, since we are interested only in *changes* in free energy (and not in absolute values of free energy), we are free to define the *zero* of free energy as conveniently as possible. By analogy with our definition of enthalpies of formation, we define the **free energy of formation** (ΔG°_f) as follows:

The free energy of formation (ΔG°_f) is the change in free energy when 1 mol of a compound in its standard state forms from its constituent elements in their standard states. The free energy of formation of pure elements in their standard states is zero.

We can measure all changes in free energy relative to pure elements in their standard states. To calculate $\Delta G^\circ_{\text{rxn}}$, we subtract the free energies of formation of the reactants multiplied by their stoichiometric coefficients from the free energies of formation of the products multiplied by their stoichiometric coefficients. In the form of an equation:

TABLE 18.3 Standard Molar Free Energies of Formation (ΔG°_f) for Selected Substances at 298 K

Substance	ΔG°_f (kJ/mol)	Substance	ΔG°_f (kJ/mol)
H ₂ (g)	0	CH ₄ (g)	−50.5
O ₂ (g)	0	H ₂ O(g)	−228.6
N ₂ (g)	0	H ₂ O(l)	−237.1
C(s, graphite)	0	NH ₃ (g)	−16.4
C(s, diamond)	2.900	NO(g)	+87.6
CO(g)	−137.2	NO ₂ (g)	+51.3
CO ₂ (g)	−394.4	NaCl(s)	−384.1

$$\Delta G^\circ_{\text{rxn}} = \sum n_p \Delta G^\circ_f(\text{products}) - \sum n_r \Delta G^\circ_f(\text{reactants})$$

[18.12]

In Equation 18.12, n_p represents the stoichiometric coefficients of the products, n_r represents the stoichiometric coefficients of the reactants, and ΔG°_f represents the standard free energies of formation. Table 18.3 lists ΔG°_f values for selected substances. You can find a more complete list in Appendix IIB. Notice that, by definition, *elements* have standard free energies of formation of zero. Notice also that most *compounds* have negative standard free energies of formation. This means that those compounds spontaneously form from their elements in their standard states. Compounds with positive free energies of formation do not spontaneously form from their elements and are therefore less common.

Example 18.8 demonstrates the calculation of $\Delta G^\circ_{\text{rxn}}$ from ΔG°_f values. This method of calculating $\Delta G^\circ_{\text{rxn}}$ works only at the temperature for which the free energies of formation are tabulated, namely, 25°C. To estimate $\Delta G^\circ_{\text{rxn}}$ at other temperatures, we must use $\Delta G^\circ_{\text{rxn}} = \Delta H^\circ_{\text{rxn}} - T\Delta S^\circ_{\text{rxn}}$, as demonstrated previously.

EXAMPLE 18.8

Calculating $\Delta G^\circ_{\text{rxn}}$ from Standard Free Energies of Formation

Ozone in the lower atmosphere is a pollutant that can form by the following reaction involving the oxidation of unburned hydrocarbons:



Use the standard free energies of formation to determine $\Delta G^\circ_{\text{rxn}}$ for this reaction at 25°C.

SOLUTION

Begin by looking up (in Appendix IIB) the standard free energies of formation for each reactant and product. Remember that the standard free energy of formation of a pure element in its standard state is zero.


Reactant/product	ΔG°_f (in kJ/mol)
CH ₄ (g)	−50.5
O ₂ (g)	0.0
CO ₂ (g)	−394.4
H ₂ O(g)	−228.6
O ₃ (g)	163.2

Calculate $\Delta G^\circ_{\text{rxn}}$ by substituting into Equation 18.12.

$$\begin{aligned} \Delta G^\circ_{\text{rxn}} &= \sum n_p \Delta G^\circ_f(\text{products}) - \sum n_r \Delta G^\circ_f(\text{reactants}) \\ &= [\Delta G^\circ_{f, \text{CO}_2(\text{g})} + 2(\Delta G^\circ_{f, \text{H}_2\text{O}(\text{g})}) + 4(\Delta G^\circ_{f, \text{O}_3(\text{g})})] - [\Delta G^\circ_{f, \text{CH}_4(\text{g})} + 8(\Delta G^\circ_{f, \text{O}_2(\text{g})})] \\ &= [-394.4 \text{ kJ} + 2(-228.6 \text{ kJ}) + 4(163.2 \text{ kJ})] - [-50.5 \text{ kJ} + 8(0.0 \text{ kJ})] \\ &= -198.8 \text{ kJ} + 50.5 \text{ kJ} \\ &= -148.3 \text{ kJ} \end{aligned}$$

FOR PRACTICE 18.8

One reaction that occurs within a catalytic converter in the exhaust pipe of a car is the simultaneous oxidation of carbon monoxide and reduction of nitrogen monoxide (both of which are harmful pollutants).



Use standard free energies of formation to determine $\Delta G^\circ_{\text{rxn}}$ for this reaction at 25°C. Is the reaction spontaneous at standard conditions?

FOR MORE PRACTICE 18.8

In For Practice 18.7, you calculated $\Delta G^\circ_{\text{rxn}}$ for the simultaneous oxidation of carbon monoxide and reduction of nitrogen monoxide using standard free energies of formation. Calculate $\Delta G^\circ_{\text{rxn}}$ for that reaction again at 25°C, only this time use $\Delta G^\circ_{\text{rxn}} = \Delta H^\circ_{\text{rxn}} - T\Delta S^\circ_{\text{rxn}}$. How do the two values compare? Use your results to calculate $\Delta G^\circ_{\text{rxn}}$ at 500.0 K and explain why you could not calculate $\Delta G^\circ_{\text{rxn}}$ at 500.0 K using tabulated standard free energies of formation.

Calculating $\Delta G^\circ_{\text{rxn}}$ for a Stepwise Reaction from the Changes in Free Energy for Each of the Steps

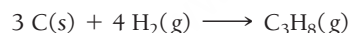
Recall from Section 9.6 that since enthalpy is a state function, we can calculate $\Delta H^\circ_{\text{rxn}}$ for a stepwise reaction from the sum of the changes in enthalpy for each step (according to Hess's law). Since free energy is also a state function, the same relationships that we covered in Chapter 9 for enthalpy also apply to free energy:

1. If a chemical equation is multiplied by some factor, $\Delta G^\circ_{\text{rxn}}$ is also multiplied by the same factor.
2. If a chemical equation is reversed, $\Delta G^\circ_{\text{rxn}}$ changes sign.
3. If a chemical equation can be expressed as the sum of a series of steps, $\Delta G^\circ_{\text{rxn}}$ for the overall equation is the sum of the free energies of reactions for each step.

Example 18.9 illustrates the use of these relationships to calculate $\Delta G^\circ_{\text{rxn}}$ for a stepwise reaction.

EXAMPLE 18.9**Calculating $\Delta G^\circ_{\text{rxn}}$ for a Stepwise Reaction**

Find $\Delta G^\circ_{\text{rxn}}$ for the reaction:



Use the following reactions with known values of ΔG° :

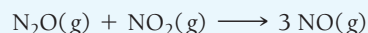
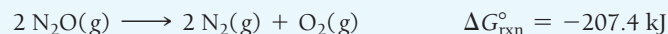

**SOLUTION**

To work this problem, manipulate the reactions with known values of $\Delta G^\circ_{\text{rxn}}$ in such a way as to get the reactants of interest on the left, the products of interest on the right, and other species to cancel.

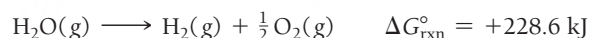
Since the first reaction has C_3H_8 as a reactant, and the reaction of interest has C_3H_8 as a product, reverse the first reaction and change the sign of $\Delta G^\circ_{\text{rxn}}$.	$3 \text{CO}_2\text{(g)} + 4 \text{H}_2\text{O(g)} \longrightarrow \text{C}_3\text{H}_8\text{(g)} + 5 \text{O}_2\text{(g)} \quad \Delta G^\circ_{\text{rxn}} = +2074 \text{ kJ}$
The second reaction has C as a reactant and CO_2 as a product, as required in the reaction of interest. However, the coefficient for C is 1, and in the reaction of interest, the coefficient for C is 3. Therefore, multiply this equation and its $\Delta G^\circ_{\text{rxn}}$ by 3.	$3 \times [\text{C(s)} + \text{O}_2\text{(g)} \longrightarrow \text{CO}_2\text{(g)}] \quad \Delta G^\circ_{\text{rxn}} = 3 \times (-394.4 \text{ kJ})$ $= -1183 \text{ kJ}$
The third reaction has $\text{H}_2\text{(g)}$ as a reactant, as required. However, the coefficient for H_2 is 2, and in the reaction of interest, the coefficient for H_2 is 4. Multiply this reaction and its $\Delta G^\circ_{\text{rxn}}$ by 2.	$2 \times [2 \text{H}_2\text{(g)} + \text{O}_2\text{(g)} \longrightarrow 2 \text{H}_2\text{O(g)}] \quad \Delta G^\circ_{\text{rxn}} = 2 \times (-457.1 \text{ kJ})$ $= -914.2$
Lastly, rewrite the three reactions after multiplying by the indicated factors and show how they sum to the reaction of interest. $\Delta G^\circ_{\text{rxn}}$ for the reaction of interest is then the sum of the ΔG° values for the steps.	$ \begin{array}{rcl} \cancel{3 \text{CO}_2\text{(g)}} + \cancel{4 \text{H}_2\text{O(g)}} & \longrightarrow & \text{C}_3\text{H}_8\text{(g)} + \cancel{5 \text{O}_2\text{(g)}} \quad \Delta G^\circ_{\text{rxn}} = +2074 \text{ kJ} \\ 3 \text{C(s)} + \cancel{3 \text{O}_2\text{(g)}} & \longrightarrow & \cancel{3 \text{CO}_2\text{(g)}} \quad \Delta G^\circ_{\text{rxn}} = -1183 \text{ kJ} \\ 4 \text{H}_2\text{(g)} + \cancel{2 \text{O}_2\text{(g)}} & \longrightarrow & \cancel{4 \text{H}_2\text{O(g)}} \quad \Delta G^\circ_{\text{rxn}} = -914.2 \text{ kJ} \\ \hline 3 \text{C(s)} + 4 \text{H}_2\text{(g)} & \longrightarrow & \text{C}_3\text{H}_8\text{(g)} \quad \Delta G^\circ_{\text{rxn}} = -23 \text{ kJ} \end{array} $

—Continued on the next page

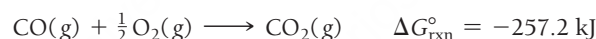
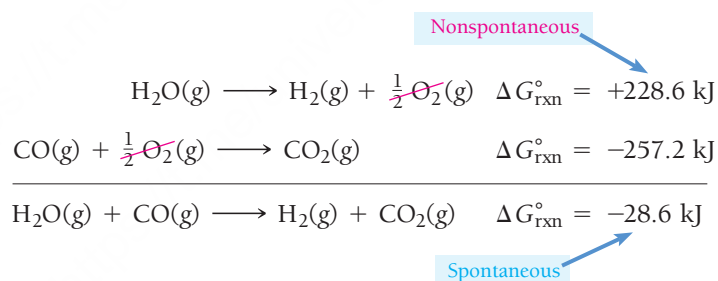
Continued from the previous page—

FOR PRACTICE 18.9Find $\Delta G_{\text{rxn}}^{\circ}$ for the reaction:Use the following reactions with known ΔG values:**Making a Nonspontaneous Process Spontaneous**

As we mentioned in Section 18.2, a process that is nonspontaneous can be made spontaneous by coupling it with another process that is highly spontaneous. For example, hydrogen gas is a potential future fuel because it can be used in a fuel cell (a type of battery in which the reactants are constantly supplied—see Chapter 19) to generate electricity. The main problem with switching to hydrogen is securing a source. Where can we get the huge amounts of hydrogen gas that we need to meet our world's energy demands? Earth's oceans and lakes contain vast amounts of hydrogen. But that hydrogen is locked up in water molecules, and the decomposition of water into hydrogen and oxygen has a positive $\Delta G_{\text{rxn}}^{\circ}$ and is therefore nonspontaneous:

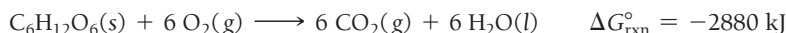


To obtain hydrogen from water, we need to find another reaction with a highly negative $\Delta G_{\text{rxn}}^{\circ}$ that can couple with the decomposition reaction to give an overall reaction with a negative $\Delta G_{\text{rxn}}^{\circ}$. For example, the oxidation of carbon monoxide to carbon dioxide has a large negative $\Delta G_{\text{rxn}}^{\circ}$ and is highly spontaneous:

If we add the two reactions together, we get a negative $\Delta G_{\text{rxn}}^{\circ}$:

The reaction between water and carbon monoxide is thus a spontaneous way to generate hydrogen gas.

The coupling of nonspontaneous reactions with highly spontaneous ones is also important in biological systems. The synthesis reactions that create the complex biological molecules (such as proteins and DNA) needed by living organisms, for example, are themselves nonspontaneous. Living systems grow and reproduce by coupling these nonspontaneous reactions to highly spontaneous ones. The main spontaneous reaction that ultimately drives the nonspontaneous ones is the metabolism of food. The oxidation of glucose, for example, is highly spontaneous:



Spontaneous reactions such as these ultimately drive the nonspontaneous reactions necessary to sustain life.

Why Free Energy Is “Free”

We often want to use the energy released by a chemical reaction to do work. For example, in an automobile, we use the energy released by the combustion of gasoline to move the car forward. The change in free energy of a chemical reaction represents the maximum amount of energy available, or *free*, to do

work (if $\Delta G^\circ_{\text{rxn}}$ is negative). For many reactions, the amount of free energy change is less than the change in enthalpy for the reaction.

Consider the reaction between carbon and hydrogen occurring at 25°C:



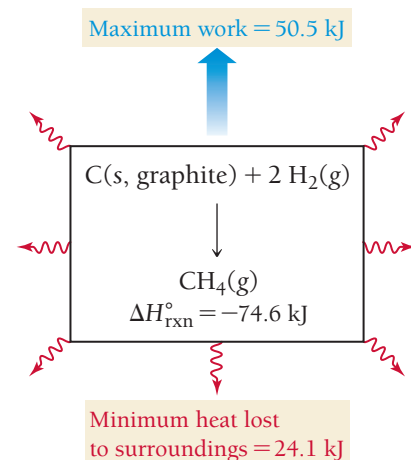
$$\Delta H^\circ_{\text{rxn}} = -74.6 \text{ kJ}$$

$$\Delta S^\circ_{\text{rxn}} = -80.8 \text{ J/K}$$

$$\Delta G^\circ_{\text{rxn}} = -50.5 \text{ kJ}$$

The reaction is exothermic and gives off 74.6 kJ of heat energy. However, the maximum amount of energy available for useful work is only 50.5 kJ (**Figure 18.7** ▶). Why? We can see that the change in entropy of the system is negative. Nevertheless, the reaction is spontaneous. This is possible only if some of the emitted heat goes to increase the entropy of the surroundings by an amount sufficient to make the change in entropy of the *universe* positive. The amount of energy available to do work (the free energy) is what remains after accounting for the heat that must be lost to the surroundings.

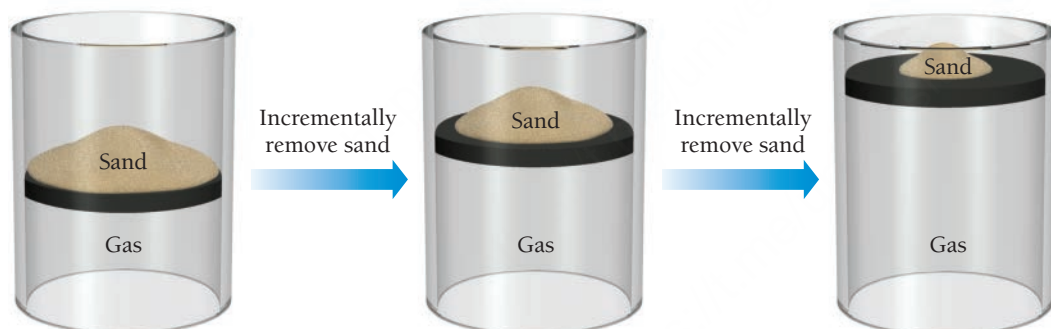
The change in free energy for a chemical reaction represents a *theoretical limit* as to how much work can be done by the reaction. In a *real* reaction, the amount of energy available to do work is even *less* than $\Delta G^\circ_{\text{rxn}}$ because additional energy is lost to the surroundings as heat. The only reactions that reach the theoretical limit are reversible reactions (see Section 18.4 for the definition of reversible processes). A reversible chemical reaction occurs infinitesimally slowly, and the free energy is drawn out in infinitesimally small increments that exactly match the amount of energy that the reaction is producing during that increment (**Figure 18.8** ▼).



▲ FIGURE 18.7 Free Energy Although the reaction produces 74.6 kJ of heat, only a maximum of 50.5 kJ is available to do work. The rest of the energy is lost to the surroundings.

Reversible Process

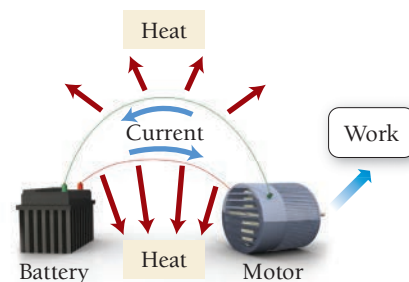
Weight of sand exactly matches pressure at each increment.



▲ FIGURE 18.8 A Reversible Process In a reversible process, the free energy is drawn out in infinitesimally small increments that exactly match the amount of energy that the process is producing in that increment. In this case, grains of sand are removed one at a time, resulting in a series of small expansions in which the weight of sand exactly matches the pressure of the expanding gas. This process is close to reversible—each sand grain would need to have an infinitesimally small mass for the process to be fully reversible.

All real reactions are irreversible and therefore do not achieve the theoretical limit of available free energy. Let's return to the discharging battery from the opening section of this chapter as an example of this concept. A battery contains chemical reactants configured in such a way that, upon spontaneous reaction, they produce an electrical current. We can harness the free energy released by the reaction to do work. For example, an electric motor can be wired to the battery. Flowing electrical current makes the motor turn (**Figure 18.9** ▶).

Because of the resistance in the wire, the flowing electrical current also produces some heat, which is lost to the surroundings and is not available to do work. The amount of free energy lost as heat can be decreased by slowing down the rate of current flow. The slower the rate of current flow, the less free energy is lost as heat and the more is available to do work. However, only in the theoretical case of infinitesimally slow current flow is the maximum amount of work (equal to $\Delta G^\circ_{\text{rxn}}$) done. Any real rate of



▲ FIGURE 18.9 Energy Loss in a Battery When current is drawn from a battery to do work, some energy is lost as heat due to resistance in the wire. Consequently, the quantity of energy required to recharge the battery is more than the quantity of work done.

current flow results in some loss of energy as heat. This lost energy is the “heat tax” that we discussed in the opening section of this chapter. Recharging the battery necessarily requires more energy than was obtained as work because some of the energy was lost as heat. In other words, during discharging and recharging, the battery has gone through a cycle in which it returns to its original (charged) state. However, the surroundings have gained some heat during the process, and the entropy of the surroundings has increased (which makes the process spontaneous). Any real (or irreversible) cyclical process such as this suffers the same fate—the system may return to its original state, but the surroundings do not, resulting in the permanent dispersal of energy to the surroundings.

If the change in free energy of a chemical reaction is positive, then $\Delta G_{\text{rxn}}^{\circ}$ represents the *minimum amount of energy required to make the reaction occur*. Again, $\Delta G_{\text{rxn}}^{\circ}$ represents a theoretical limit. Making a real nonspontaneous reaction occur always requires more energy than the theoretical limit.

18.9 Free Energy Changes for Nonstandard States: The Relationship between $\Delta G_{\text{rxn}}^{\circ}$ and ΔG_{rxn}

In Section 18.8, we learned how to calculate the *standard* free energy change for a reaction ($\Delta G_{\text{rxn}}^{\circ}$). However, the standard free energy change applies only to a very narrow set of conditions, namely, those conditions in which the reactants and products are in their standard states.

Standard versus Nonstandard States

Consider the standard free energy change for the evaporation of liquid water to gaseous water:



The standard free energy change for this process is positive, so the process is nonspontaneous. But you know that if you spill water onto the floor under ordinary conditions, it spontaneously evaporates. Why? *Because under ordinary conditions the reactants and products are not in their standard states* and $\Delta G_{\text{rxn}}^{\circ}$ applies only when the reactants and product are in their standard states, sometimes called *standard conditions*. For a gas (such as the water vapor in the reaction just given), the standard state is the pure gas at a partial pressure of 1 atmosphere. In a flask containing liquid water and water vapor in its standard state ($P_{\text{H}_2\text{O}} = 1 \text{ atm}$) at 25°C , the water does not vaporize. In fact, since $\Delta G_{\text{rxn}}^{\circ}$ is negative for the reverse reaction, the reaction spontaneously occurs in reverse—water vapor condenses.

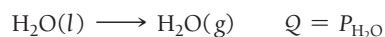
In open air under ordinary circumstances, the partial pressure of water vapor is much less than 1 atm. The state of the water vapor is not its standard state, and therefore the value of $\Delta G_{\text{rxn}}^{\circ}$ does not apply. For the nonstandard state, we must calculate ΔG_{rxn} (as opposed to $\Delta G_{\text{rxn}}^{\circ}$) to predict spontaneity.

The Free Energy Change of a Reaction under Nonstandard Conditions

We can calculate the **free energy change of a reaction under nonstandard conditions** (ΔG_{rxn}) from $\Delta G_{\text{rxn}}^{\circ}$ using the relationship:

$$\Delta G_{\text{rxn}} = \Delta G_{\text{rxn}}^{\circ} + RT \ln Q \quad [18.13]$$

where Q is the reaction quotient (defined in Section 15.7), T is the temperature in kelvins, and R is the gas constant in the appropriate units ($8.314 \text{ J/mol} \cdot \text{K}$). In Equation 18.13 and all subsequent thermodynamic equations, we use Q_p for reactions involving gases and Q_c for reactions involving substances dissolved in solution. We can demonstrate the use of this equation by applying it to the liquid–vapor water equilibrium under several different conditions, as shown in **Figure 18.10**. Note that by the law of mass action, for this equilibrium, $Q = P_{\text{H}_2\text{O}}$ (where the pressure is expressed in atmospheres):



▲ Spilled water spontaneously evaporates even though ΔG° for the vaporization of water is positive. Why?

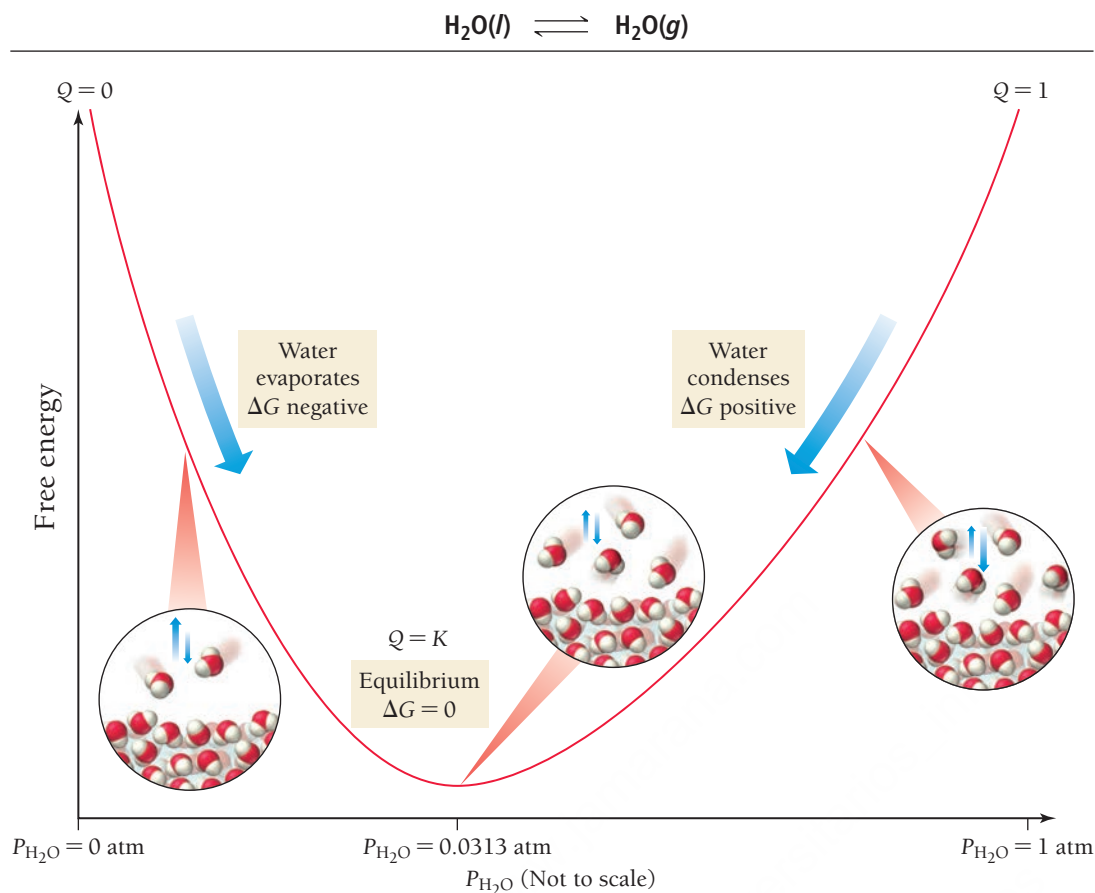


FIGURE 18.10 Free Energy versus Pressure for Water The free energy change for the vaporization of water is a function of pressure.

Standard Conditions Under standard conditions, $P_{\text{H}_2\text{O}} = 1 \text{ atm}$ and therefore $Q = 1$. Substituting, we get the expression:

$$\begin{aligned}\Delta G_{\text{rxn}} &= \Delta G_{\text{rxn}}^\circ + RT \ln Q \\ &= +8.59 \text{ kJ/mol} + RT \ln(1) \\ &= +8.59 \text{ kJ/mol}\end{aligned}$$

Under standard conditions, Q is always equal to 1, and since $\ln(1) = 0$, the value of ΔG_{rxn} is equal to $\Delta G_{\text{rxn}}^\circ$, as expected. For the liquid–vapor water equilibrium, because $\Delta G_{\text{rxn}}^\circ > 0$, the reaction is not spontaneous in the forward direction but is spontaneous in the reverse direction. As stated previously, under standard conditions water vapor condenses into liquid water.

Equilibrium Conditions At 25.00°C , liquid water is in equilibrium with water vapor at a pressure of 0.0313 atm ; therefore, $Q = K_p = 0.0313$. Substituting:

$$\begin{aligned}\Delta G_{\text{rxn}} &= \Delta G_{\text{rxn}}^\circ + RT \ln(0.0313) \\ &= +8.59 \text{ kJ/mol} + 8.314 \frac{\text{J}}{\text{mol} \cdot \text{K}} (298.15 \text{ K}) \ln(0.0313) \\ &= +8.59 \text{ kJ/mol} + (-8.59 \times 10^3 \text{ J/mol}) \\ &= +8.59 \text{ kJ/mol} - 8.59 \text{ kJ/mol} \\ &= 0\end{aligned}$$

Under equilibrium conditions, the value of $RT \ln Q$ is always equal in magnitude but opposite in sign to the value of $\Delta G_{\text{rxn}}^\circ$. Therefore, the value of ΔG_{rxn} is zero. Because $\Delta G_{\text{rxn}} = 0$, the reaction is not spontaneous in either direction, as expected for a reaction at equilibrium.

Other Nonstandard Conditions To calculate the value of ΔG_{rxn} under any other set of nonstandard conditions, calculate Q and substitute the calculated value into Equation 18.14. For example, imagine

A water partial pressure of 5.00×10^{-3} atm corresponds to a relative humidity of 16% at 25°C .

that the partial pressure of water vapor in the air on a dry (nonhumid) day is 5.00×10^{-3} atm, so $Q = 5.00 \times 10^{-3}$. Substituting:

$$\begin{aligned}\Delta G_{\text{rxn}} &= \Delta G_{\text{rxn}}^\circ + RT \ln(5.00 \times 10^{-3}) \\ &= +8.59 \text{ kJ/mol} + 8.314 \frac{\text{J}}{\text{mol} \cdot \text{K}} (298 \text{ K}) \ln(5.00 \times 10^{-3}) \\ &= +8.59 \text{ kJ/mol} + (-13.1 \times 10^3 \text{ J/mol}) \\ &= +8.59 \text{ kJ/mol} - 13.1 \text{ kJ/mol} \\ &= -4.5 \text{ kJ/mol}\end{aligned}$$

Under these conditions, $\Delta G_{\text{rxn}} < 0$, so the reaction is spontaneous in the forward direction, consistent with our experience of water evaporating when spilled on the floor.

EXAMPLE 18.10

Calculating ΔG_{rxn} under Nonstandard Conditions

Interactive
Worked Example
Video 18.10

PEARSON
eText
2.0

Consider the reaction at 298 K:



Calculate ΔG_{rxn} under these conditions:

$$P_{\text{NO}} = 0.100 \text{ atm}; \quad P_{\text{O}_2} = 0.100 \text{ atm}; \quad P_{\text{NO}_2} = 2.00 \text{ atm}$$

Is the reaction more or less spontaneous under these conditions than under standard conditions?

SOLUTION

Use the law of mass action to calculate Q .

$$Q = \frac{P_{\text{NO}_2}^2}{P_{\text{NO}}^2 P_{\text{O}_2}} = \frac{(2.00)^2}{(0.100)^2 (0.100)} = 4.00 \times 10^3$$

Substitute Q , T , and $\Delta G_{\text{rxn}}^\circ$ into Equation 18.13 to calculate ΔG_{rxn} . (Since the units of R include joules, write $\Delta G_{\text{rxn}}^\circ$ in joules.)

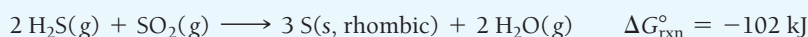
$$\begin{aligned}\Delta G_{\text{rxn}} &= \Delta G_{\text{rxn}}^\circ + RT \ln Q \\ &= -71.2 \times 10^3 \text{ J} + 8.314 \frac{\text{J}}{\text{mol} \cdot \text{K}} (298 \text{ K}) \ln(4.00 \times 10^3) \\ &= -71.2 \times 10^3 \text{ J} + 20.5 \times 10^3 \text{ J} \\ &= -50.7 \times 10^3 \text{ J} \\ &= -50.7 \text{ kJ}\end{aligned}$$

The reaction is spontaneous under these conditions but less spontaneous than it would be under standard conditions (because ΔG_{rxn} is less negative than $\Delta G_{\text{rxn}}^\circ$).

CHECK The calculated result is consistent with what you would expect based on Le Châtelier's principle (see Section 15.9); increasing the concentration of the products and decreasing the concentration of the reactants relative to standard conditions should make the reaction less spontaneous than it was under standard conditions.

FOR PRACTICE 18.10

Consider the reaction at 298 K:



Calculate ΔG_{rxn} under these conditions:

$$P_{\text{H}_2\text{S}} = 2.00 \text{ atm}; \quad P_{\text{SO}_2} = 1.50 \text{ atm}; \quad P_{\text{H}_2\text{O}} = 0.0100 \text{ atm}$$

Is the reaction more or less spontaneous under these conditions than under standard conditions?

Free Energy Changes and Le Châtelier's Principle

18.5

Cc

Conceptual
Connection

According to Le Châtelier's principle and the dependence of free energy on reactant and product concentrations, which statement is true? (Assume that both the reactants and products are gaseous.)

- (a) A high concentration of reactants relative to products results in a more spontaneous reaction than one in which the reactants and products are in their standard states.
- (b) A high concentration of products relative to reactants results in a more spontaneous reaction than one in which the reactants and products are in their standard states.
- (c) A reaction in which the reactants are in standard states, but in which no products have formed, has a ΔG_{rxn} that is more positive than $\Delta G_{\text{rxn}}^\circ$.

18.10 Free Energy and Equilibrium: Relating $\Delta G_{\text{rxn}}^\circ$ to the Equilibrium Constant (K)

We have seen that $\Delta G_{\text{rxn}}^\circ$ determines the spontaneity of a reaction when the reactants and products are in their standard states. In Chapter 15, we learned that the equilibrium constant (K) determines how far a reaction goes toward products, a measure of spontaneity. Therefore, as you might expect, the standard free energy change of a reaction and the equilibrium constant are related—the equilibrium constant becomes larger as the standard free energy change becomes more negative. In other words, if, on one hand, the reactants in a particular reaction undergo a large *negative* free energy change as they become products, then the reaction has a large equilibrium constant, with products strongly favored at equilibrium. If, on the other hand, the reactants in a particular reaction undergo a large *positive* free energy change as they become products, then the reaction has a small equilibrium constant, with reactants strongly favored at equilibrium.

We can derive a relationship between $\Delta G_{\text{rxn}}^\circ$ and K from Equation 18.13. We know that at equilibrium $Q = K$ and $\Delta G_{\text{rxn}} = 0$. Making these substitutions:

$$\Delta G_{\text{rxn}} = \Delta G_{\text{rxn}}^\circ + RT \ln Q$$

$$0 = \Delta G_{\text{rxn}}^\circ + RT \ln K$$

$$\Delta G_{\text{rxn}}^\circ = -RT \ln K \quad [18.14]$$

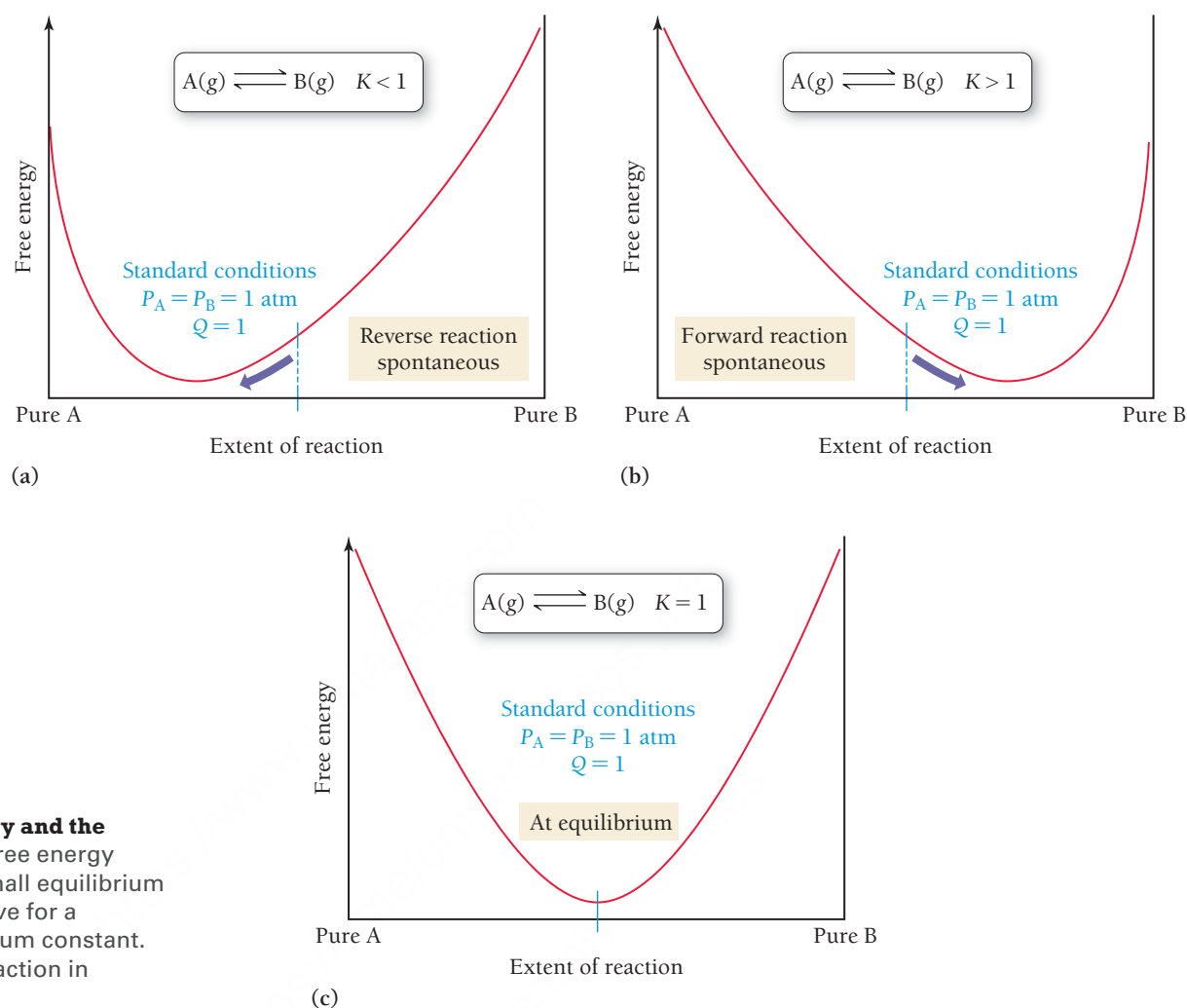
In Equation 18.14 as in all thermodynamic equations, we use K_p for reactions involving gases, and we use K_c for reactions involving substances dissolved in solution.

We can better understand the relationship between $\Delta G_{\text{rxn}}^\circ$ and K by considering the following ranges of values for K , as summarized in **Figure 18.11** ► on the next page:

- When $K < 1$, $\ln K$ is negative and $\Delta G_{\text{rxn}}^\circ$ is positive. Under standard conditions (when $Q = 1$), the reaction is spontaneous in the reverse direction.
- When $K > 1$, $\ln K$ is positive and $\Delta G_{\text{rxn}}^\circ$ is negative. Under standard conditions (when $Q = 1$), the reaction is spontaneous in the forward direction.
- When $K = 1$, $\ln K$ is zero and $\Delta G_{\text{rxn}}^\circ$ is zero. The reaction happens to be at equilibrium under standard conditions.

The relationship between $\Delta G_{\text{rxn}}^\circ$ and K is logarithmic—small changes in $\Delta G_{\text{rxn}}^\circ$ have a large effect on K .

Free Energy and the Equilibrium Constant



► **FIGURE 18.11 Free Energy and the Equilibrium Constant** (a) Free energy curve for a reaction with a small equilibrium constant. (b) Free energy curve for a reaction with a large equilibrium constant. (c) Free energy curve for a reaction in which $K = 1$.

EXAMPLE 18.11**The Equilibrium Constant and $\Delta G^\circ_{\text{rxn}}$**

Use tabulated free energies of formation to calculate the equilibrium constant for the reaction at 298 K.

**SOLUTION**

Look up (in Appendix IIB) the standard free energies of formation for each reactant and product.

Calculate $\Delta G^\circ_{\text{rxn}}$ by substituting into Equation 18.13.

Reactant or product	ΔG°_f (in kJ/mol)
$\text{N}_2\text{O}_4(g)$	99.8
$\text{NO}_2(g)$	51.3

$$\begin{aligned}
 \Delta G^\circ_{\text{rxn}} &= \sum n_p \Delta G^\circ_f (\text{products}) - \sum n_r \Delta G^\circ_f (\text{reactants}) \\
 &= 2[\Delta G^\circ_{f, \text{NO}_2(g)}] - \Delta G^\circ_{f, \text{N}_2\text{O}_4(g)} \\
 &= 2(51.3 \text{ kJ}) - 99.8 \text{ kJ} \\
 &= 2.8 \text{ kJ}
 \end{aligned}$$

Interactive
Worked Example
Video 18.11

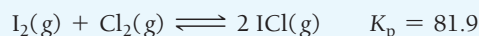
PEARSON
eText
2.0

Calculate K from $\Delta G_{\text{rxn}}^{\circ}$ by solving Equation 18.14 for K and substituting the values of $\Delta G_{\text{rxn}}^{\circ}$ and temperature.

$$\begin{aligned}\Delta G_{\text{rxn}}^{\circ} &= -RT \ln K \\ \ln K &= \frac{-\Delta G_{\text{rxn}}^{\circ}}{RT} \\ &= \frac{-2.8 \times 10^3 \text{ J/mol}}{8.314 \frac{\text{J}}{\text{mol} \cdot \text{K}} (298 \text{ K})} \\ &= -1.13 \\ K &= e^{-1.13} \\ &= 0.32\end{aligned}$$

FOR PRACTICE 18.11

Calculate $\Delta G_{\text{rxn}}^{\circ}$ at 298 K for the reaction:

 **K and $\Delta G_{\text{rxn}}^{\circ}$**

The equilibrium constant for the reaction $\text{A}(\text{g}) \rightleftharpoons \text{B}(\text{g})$ is less than one. What can you conclude about $\Delta G_{\text{rxn}}^{\circ}$ for the reaction?

- (a) $\Delta G_{\text{rxn}}^{\circ} = 0$ (b) $\Delta G_{\text{rxn}}^{\circ} < 0$ (c) $\Delta G_{\text{rxn}}^{\circ} > 0$

18.6**Cc**

Conceptual
Connection

**The Conditions of Spontaneity**

A reaction is spontaneous under a certain set of conditions. Select all equations that *must be true* for this reaction under these conditions.

$\Delta G_{\text{rxn}} < 0$, $\Delta G_{\text{rxn}} > 0$, $\Delta G_{\text{rxn}} = 0$, $\Delta G_{\text{rxn}}^{\circ} < 0$, $\Delta G_{\text{rxn}}^{\circ} > 0$, $\Delta G_{\text{rxn}}^{\circ} = 0$, $\Delta H_{\text{rxn}} < 0$, $\Delta H_{\text{rxn}} > 0$, $\Delta H_{\text{rxn}} = 0$, $\Delta S_{\text{rxn}} < 0$, $\Delta S_{\text{rxn}} > 0$, $\Delta S_{\text{rxn}} = 0$, $Q = K$, $Q < K$, $Q > K$

18.7**Cc**

Conceptual
Connection

**The Temperature Dependence of the Equilibrium Constant**

We now have an equation that relates the standard free energy change for a reaction ($\Delta G_{\text{rxn}}^{\circ}$) to the equilibrium constant for a reaction (K):

$$\Delta G_{\text{rxn}}^{\circ} = -RT \ln K \quad [18.15]$$

We also have an equation for how the free energy change for a reaction ($\Delta G_{\text{rxn}}^{\circ}$) depends on temperature (T):

$$\Delta G_{\text{rxn}}^{\circ} = \Delta H_{\text{rxn}}^{\circ} - T \Delta S_{\text{rxn}}^{\circ} \quad [18.16]$$

We can combine these two equations to obtain an equation that indicates how the equilibrium constant depends on temperatures. Combining Equations 18.15 and 18.16, we get:

$$-RT \ln K = \Delta H_{\text{rxn}}^{\circ} - T \Delta S_{\text{rxn}}^{\circ} \quad [18.17]$$

We can then divide both sides of Equation 18.17 by the quantity RT :

$$-\ln K = \frac{\Delta H_{\text{rxn}}^{\circ}}{RT} - \frac{T \Delta S_{\text{rxn}}^{\circ}}{RT}$$

Canceling and rearranging, we get this important result:

$$\ln K = -\frac{\Delta H_{\text{rxn}}^{\circ}}{R} \left(\frac{1}{T} \right) + \frac{\Delta S_{\text{rxn}}^{\circ}}{R} \quad [18.18]$$

$$y = mx + b$$

Equation 18.18 is in the form of a straight line. A plot of the natural log of the equilibrium constant ($\ln K$) versus the inverse of the temperature in kelvins ($1/T$) yields a straight line with a slope of $-\Delta H_{\text{rxn}}^{\circ}/R$ and a y-intercept of $\Delta S_{\text{rxn}}^{\circ}/R$. Such a plot is useful for obtaining thermodynamic data (namely, $\Delta H_{\text{rxn}}^{\circ}$ and $\Delta S_{\text{rxn}}^{\circ}$) from measurements of K as a function of temperature. However, since $\Delta H_{\text{rxn}}^{\circ}$ and $\Delta S_{\text{rxn}}^{\circ}$ can themselves be slightly temperature dependent, this analysis works only over a relatively limited temperature range. We can also express the equation in a two-point form:

$$\ln \frac{K_2}{K_1} = -\frac{\Delta H_{\text{rxn}}^{\circ}}{R} \left(\frac{1}{T_2} - \frac{1}{T_1} \right) \quad [18.19]$$

We can use this equation to find $\Delta H_{\text{rxn}}^{\circ}$ from a measurement of the equilibrium constant at two different temperatures or to find the equilibrium constant at some other temperature if we know the equilibrium constant at a given temperature and $\Delta H_{\text{rxn}}^{\circ}$.

SELF-ASSESSMENT



QUIZ

- Which reaction is most likely to have a positive ΔS_{sys} ?
 - $\text{SiO}_2(\text{s}) + 3 \text{C}(\text{s}) \longrightarrow \text{SiC}(\text{s}) + 2 \text{CO}(\text{g})$
 - $6 \text{CO}_2(\text{g}) + 6 \text{H}_2\text{O}(\text{g}) \longrightarrow \text{C}_6\text{H}_{12}\text{O}_6(\text{s}) + 6 \text{O}_2(\text{g})$
 - $\text{CO}(\text{g}) + \text{Cl}_2(\text{g}) \longrightarrow \text{COCl}_2(\text{g})$
 - $3 \text{NO}_2(\text{g}) + \text{H}_2\text{O}(\text{l}) \longrightarrow 2 \text{HNO}_3(\text{l}) + \text{NO}(\text{g})$
- Consider the signs for ΔH_{rxn} and ΔS_{rxn} for several different reactions. In which case is the reaction spontaneous at all temperatures?
 - $\Delta H_{\text{rxn}} < 0$; $\Delta S_{\text{rxn}} < 0$
 - $\Delta H_{\text{rxn}} > 0$; $\Delta S_{\text{rxn}} > 0$
 - $\Delta H_{\text{rxn}} < 0$; $\Delta S_{\text{rxn}} > 0$
 - $\Delta H_{\text{rxn}} > 0$; $\Delta S_{\text{rxn}} < 0$
- Arrange the gases— F_2 , Ar, and CH_3F —in order of increasing standard entropy (S°) at 298 K.
 - $\text{F}_2 < \text{Ar} < \text{CH}_3\text{F}$
 - $\text{CH}_3\text{F} < \text{F}_2 < \text{Ar}$
 - $\text{CH}_3\text{F} < \text{Ar} < \text{F}_2$
 - $\text{Ar} < \text{F}_2 < \text{CH}_3\text{F}$
- What is the change in entropy that occurs in the system when 1.00 mol of methanol (CH_3OH) vaporizes from a liquid to a gas at its boiling point (64.6°C)? For methanol, $\Delta H_{\text{vap}} = 35.21 \text{ kJ/mol}$.
 - 104 J/K
 - 104 J/K
 - 545 J/K
 - 545 J/K
- For a certain reaction $\Delta H_{\text{rxn}} = 54.2 \text{ kJ}$. Calculate the change in entropy for the surroundings (ΔS_{sur}) for the reaction at 25.0°C . (Assume constant pressure and temperature.)
 - $2.17 \times 10^3 \text{ J/K}$
 - $-2.17 \times 10^3 \text{ J/K}$
 - 182 J/K
 - 182 J/K
- For a certain reaction $\Delta H_{\text{rxn}}^{\circ} = -255 \text{ kJ}$ and $\Delta S_{\text{rxn}}^{\circ} = 211 \text{ J/K}$. Calculate $\Delta G_{\text{rxn}}^{\circ}$ at 55°C .
 - $11.9 \times 10^3 \text{ kJ}$
 - $69.5 \times 10^3 \text{ kJ}$
 - 267 kJ
 - 324 kJ
- Use standard entropies to calculate $\Delta S_{\text{rxn}}^{\circ}$ for the balanced chemical equation:

$$2 \text{PCl}_3(\text{l}) + \text{O}_2(\text{g}) \longrightarrow 2 \text{POCl}_3(\text{l})$$

Substance	$S^{\circ} (\text{J/mol} \cdot \text{K})$
$\text{POCl}_3(\text{l})$	222.5
$\text{POCl}_3(\text{g})$	325.5
$\text{PCl}_3(\text{l})$	217.1
$\text{PCl}_3(\text{g})$	311.8
$\text{O}_2(\text{g})$	205.2

 - 194.4 J/K
 - 199.8 J/K
 - 10.8 J/K
 - 1084.4 J/K
- Use standard free energies of formation to calculate $\Delta G_{\text{rxn}}^{\circ}$ for the balanced chemical equation:



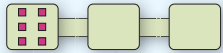
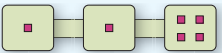
$$\text{Mg}(\text{s}) + \text{N}_2\text{O}(\text{g}) \longrightarrow \text{MgO}(\text{s}) + \text{N}_2(\text{g})$$

Substance	$\Delta G_f^{\circ} (\text{kJ/mol})$
$\text{N}_2\text{O}(\text{g})$	103.7
$\text{MgO}(\text{s})$	-569.3

 - 673.0 kJ
 - 673.0 kJ
 - 465.6 kJ
 - 465.6 kJ
- Find $\Delta G_{\text{rxn}}^{\circ}$ for the reaction $2 \text{A} + \text{B} \longrightarrow 2 \text{C}$ from the given data.

$$\begin{array}{ll} \text{A} \longrightarrow \text{B} & \Delta G_{\text{rxn}}^{\circ} = 128 \text{ kJ} \\ \text{C} \longrightarrow 2 \text{B} & \Delta G_{\text{rxn}}^{\circ} = 455 \text{ kJ} \\ \text{A} \longrightarrow \text{C} & \Delta G_{\text{rxn}}^{\circ} = -182 \text{ kJ} \end{array}$$
 - 401 kJ
 - 509 kJ
 - 401 kJ
 - 509 kJ
- For the following reaction, $\Delta G_{\text{rxn}}^{\circ} = 9.4 \text{ kJ}$ at 25°C . Find ΔG_{rxn} when $P_{\text{NO}_2} = 0.115 \text{ atm}$ and $P_{\text{NO}} = 9.7 \text{ atm}$ at 25°C .

$$3 \text{NO}_2(\text{g}) + \text{H}_2\text{O}(\text{l}) \longrightarrow 2 \text{HNO}_3(\text{l}) + \text{NO}(\text{g})$$
 - 12.3 kJ
 - $21.7 \times 10^3 \text{ kJ}$
 - 31.1 kJ
 - 18.8 kJ

11. The reaction $A(g) \rightleftharpoons B(g)$ has an equilibrium constant of $K_p = 2.3 \times 10^{-5}$. What can you conclude about the sign of $\Delta G_{\text{rxn}}^\circ$ for the reaction?
- $\Delta G_{\text{rxn}}^\circ = 0$
 - $\Delta G_{\text{rxn}}^\circ$ is negative
 - $\Delta G_{\text{rxn}}^\circ$ is positive
 - Nothing can be concluded about the sign of $\Delta G_{\text{rxn}}^\circ$ for the reaction.
12. A reaction has an equilibrium constant of $K_p = 0.018$ at 25°C . Find $\Delta G_{\text{rxn}}^\circ$ for the reaction at this temperature.
- -835 J
 - -4.32 kJ
 - -9.95 kJ
 - 9.96 kJ
13. Which distribution of six particles into three interconnected boxes has the highest entropy?
- 
 - 
 - 
 - 
14. Which process results in the increase in entropy of the universe?
- the cooling of a hot cup of coffee in room temperature air
 - the evaporation of water from a desk at room temperature
 - the melting of snow above 0°C
 - all of the above
15. Under which set of conditions is ΔG_{rxn} for the reaction $A(g) \longrightarrow B(g)$ most likely to be negative?
- $P_A = 10.0 \text{ atm}$; $P_B = 10.0 \text{ atm}$
 - $P_A = 10.0 \text{ atm}$; $P_B = 0.010 \text{ atm}$
 - $P_A = 0.010 \text{ atm}$; $P_B = 10.0 \text{ atm}$
 - $P_A = 0.010 \text{ atm}$; $P_B = 0.010 \text{ atm}$
16. Which statement is true for the freezing of liquid water below 0°C ?
- ΔH is positive; ΔS is negative; ΔG is negative
 - ΔH is negative; ΔS is negative; ΔG is negative
 - ΔH is positive; ΔS is positive; ΔG is positive
 - ΔH is positive; ΔS is negative; ΔG is positive

Answers: 1. a; 2. c; 3. d; 4. a; 5. c; 6. d; 7. a; 8. b; 9. d; 10. c; 11. c; 12. d; 13. b; 14. d; 15. b; 16. b

CHAPTER SUMMARY 18

REVIEW

MasteringChemistry™ provides end-of-chapter exercises, feedback-enriched tutorial problems, animations, and interactive activities to encourage problem solving practice and deeper understanding of key concepts and topics.

KEY LEARNING OUTCOMES

CHAPTER OBJECTIVES	ASSESSMENT
Predict the Sign of Entropy Change (18.4)	• Example 18.1 For Practice 18.1 Exercises 27–28, 35–36, 37–38, 41–42
Calculate ΔS for a Change of State (18.4)	• Example 18.2 For Practice 18.2 Exercises 31–34
Calculate Entropy Changes in the Surroundings (18.5)	• Example 18.3 For Practice 18.3 For More Practice 18.3 Exercises 37–40
Calculate Gibbs Free Energy Changes and Predicting Spontaneity from ΔH and ΔS (18.6)	• Example 18.4 For Practice 18.4 Exercises 43–48
Calculate Standard Entropy Changes ($\Delta S_{\text{rxn}}^\circ$) (18.4)	• Example 18.5 For Practice 18.5 Exercises 55–58
Calculate the Standard Change in Free Energy for a Reaction Using $\Delta G_{\text{rxn}}^\circ = \Delta H_{\text{rxn}}^\circ - T\Delta S_{\text{rxn}}^\circ$ (18.7)	• Examples 18.6, 18.7 For Practice 18.6, 18.7 Exercises 59–62, 65–66
Calculate $\Delta G_{\text{rxn}}^\circ$ from Standard Free Energies of Formation (18.7)	• Example 18.8 For Practice 18.8 For More Practice 18.8 Exercises 63–64
Determine $\Delta G_{\text{rxn}}^\circ$ for a Stepwise Reaction (18.7)	• Example 18.9 For Practice 18.9 Exercises 67–68
Calculate ΔG_{rxn} under Nonstandard Conditions (18.8)	• Example 18.10 For Practice 18.10 Exercises 69–72, 75–76
Relate the Equilibrium Constant and $\Delta G_{\text{rxn}}^\circ$ (18.9)	• Example 18.11 For Practice 18.11 Exercises 73–74, 77–82

KEY TERMS

Section 18.2

spontaneous process (798)

Section 18.3entropy (S) (800)

macrostate (800)

microstate (800)

second law of thermodynamics (801)

Section 18.4

reversible process (806)

Section 18.6Gibbs free energy (G) (811)**Section 18.7**standard entropy change for a reaction ($\Delta S_{\text{rxn}}^\circ$) (815)standard molar entropies (S°) (815)

third law of thermodynamics (815)

allotropes (817)

Section 18.8standard change in free energy ($\Delta G_{\text{rxn}}^\circ$) (820)free energy of formation (ΔG_f°) (821)**Section 18.9**free energy change of a reaction under nonstandard conditions (ΔG_{rxn}) (826)

KEY CONCEPTS

Nature's Heat Tax: You Can't Win and You Can't Break Even (18.1)

- The first law of thermodynamics states that energy can be neither created nor destroyed.
- According to the second law of thermodynamics, in every energy transaction, some energy is lost to the surroundings; this lost energy is nature's heat tax.

Spontaneous and Nonspontaneous Processes (18.2)

- Both spontaneous and nonspontaneous processes can occur, but only spontaneous processes can take place without outside intervention.
- Thermodynamics is the study of the *spontaneity* of reactions, *not* to be confused with kinetics, the study of the *rate* of reactions.

Entropy and the Second Law of Thermodynamics (18.3)

- The second law of thermodynamics states that for *any* spontaneous process, the entropy of the universe increases.
- Entropy (S) is proportional to the number of energetically equivalent ways in which the components of a system can be arranged and is a measure of energy dispersal per unit temperature.

The Entropy Changes Associated with Changes of State (18.4)

- The entropy of a substance increases as it changes state from a solid to a liquid and when it changes from a liquid to a gas.
- The change in entropy for a system undergoing a reversible change in state is $\Delta S = q_{\text{rev}}/T$.

Heat Transfer and Changes in the Entropy of the Surroundings (18.5)

- For a process to be spontaneous, the total entropy of the universe (system plus surroundings) must increase.
- The entropy of the surroundings increases when the change in *enthalpy* of the system (ΔH_{sys}) is negative (i.e., for exothermic reactions).
- The change in entropy of the surroundings for a given ΔH_{sys} depends inversely on temperature—the greater the temperature, the smaller the magnitude of ΔS_{surr} .

Gibbs Free Energy (18.6)

- Gibbs free energy, G , is a thermodynamic function that is proportional to the negative of the change in the entropy of the universe. A negative ΔG represents a spontaneous reaction, and a positive ΔG represents a nonspontaneous reaction.

- We can calculate the value of ΔG for a reaction from the values of ΔH and ΔS for the *system* using the equation $\Delta G = \Delta H - T\Delta S$.

Entropy Changes in Chemical Reactions: Calculating $\Delta S_{\text{rxn}}^\circ$ (18.7)

- We calculate the standard change in entropy for a reaction similarly to the way we calculate the standard change in enthalpy for a reaction: by subtracting the sum of the standard entropies of the reactants multiplied by their stoichiometric coefficients from the sum of the standard entropies of the products multiplied by their stoichiometric coefficients.
- Standard entropies are *absolute*; an entropy of zero is established by the third law of thermodynamics as the entropy of a perfect crystal at absolute zero.
- The entropy of a substance at a given temperature depends on factors that affect the number of energetically equivalent arrangements of the substance; these include the state, size, and molecular complexity of the substance.

Free Energy Changes in Chemical Reactions: Calculating $\Delta G_{\text{rxn}}^\circ$ (18.8)

- There are three ways to calculate $\Delta G_{\text{rxn}}^\circ$: (1) from ΔH° and ΔS° , (2) from free energies of formations (only at 25°C), and (3) from the ΔG° values of reactions that sum to the reaction of interest.
- The magnitude of a negative $\Delta G_{\text{rxn}}^\circ$ represents the theoretical amount of energy available to do work, while a positive $\Delta G_{\text{rxn}}^\circ$ represents the minimum amount of energy required to make a nonspontaneous process occur.

Free Energy Changes for Nonstandard States: The Relationship between $\Delta G_{\text{rxn}}^\circ$ and ΔG_{rxn} (18.9)

- The value of $\Delta G_{\text{rxn}}^\circ$ applies only to standard conditions, and most real conditions are not standard.
- Under nonstandard conditions, we can calculate ΔG_{rxn} from the equation $\Delta G_{\text{rxn}} = \Delta G_{\text{rxn}}^\circ + RT \ln Q$.

Free Energy and Equilibrium: Relating $\Delta G_{\text{rxn}}^\circ$ to the Equilibrium Constant (K) (18.10)

- Under standard conditions, the free energy change for a reaction is directly proportional to the negative of the natural log of the equilibrium constant, K ; the more negative the free energy change (i.e., the more spontaneous the reaction), the larger the equilibrium constant.
- We can use the temperature dependence of $\Delta G_{\text{rxn}}^\circ$, as given by $\Delta G^\circ = \Delta H^\circ - T\Delta S^\circ$, to derive an expression for the temperature dependence of the equilibrium constant.

KEY EQUATIONS AND RELATIONSHIPS

The Definition of Entropy (18.3)

$$S = k \ln W \quad k = 1.38 \times 10^{-23} \text{ J/K}$$

Change in Entropy (18.3, 18.4)

$$\Delta S = S_{\text{final}} - S_{\text{initial}}$$

$$\Delta S = q_{\text{rev}}/T \quad (\text{isothermal, reversible process})$$

Change in the Entropy of the Universe (18.5)

$$\Delta S_{\text{univ}} = \Delta S_{\text{sys}} + \Delta S_{\text{surr}}$$

Change in the Entropy of the Surroundings (18.5)

$$\Delta S_{\text{surr}} = \frac{-\Delta H_{\text{sys}}}{T} \quad (\text{constant } T, P)$$

Change in Gibbs Free Energy (18.6)

$$\Delta G = \Delta H - T\Delta S$$

The Relationship between Spontaneity and ΔH , ΔS , and T (18.6)

ΔH	ΔS	Low Temperature	High Temperature
–	+	Spontaneous	Spontaneous
+	–	Nonspontaneous	Nonspontaneous
–	–	Spontaneous	Nonspontaneous
+	+	Nonspontaneous	Spontaneous

Standard Change in Entropy (18.7)

$$\Delta S_{\text{rxn}}^{\circ} = \sum n_p S^{\circ} (\text{products}) - \sum n_r S^{\circ} (\text{reactants})$$

Methods for Calculating the Free Energy of Formation ($\Delta G_{\text{rxn}}^{\circ}$) (18.8)

$$1. \Delta G_{\text{rxn}}^{\circ} = \Delta H_{\text{rxn}}^{\circ} - T\Delta S_{\text{rxn}}^{\circ}$$

$$2. \Delta G_{\text{rxn}}^{\circ} = \sum n_p \Delta G_f^{\circ} (\text{products}) - \sum n_r \Delta G_f^{\circ} (\text{reactants})$$

$$3. \Delta G_{\text{rxn}}^{\circ} (\text{overall}) = \Delta G_{\text{rxn}}^{\circ} (\text{step 1}) + \Delta G_{\text{rxn}}^{\circ} (\text{step 2}) + \Delta G_{\text{rxn}}^{\circ} (\text{step 3}) + \dots$$

The Relationship between $\Delta G_{\text{rxn}}^{\circ}$ and ΔG_{rxn} (18.9)

$$\Delta G_{\text{rxn}} = \Delta G_{\text{rxn}}^{\circ} + RT \ln Q \quad R = 8.314 \text{ J/mol} \cdot \text{K}$$

The Relationship between $\Delta G_{\text{rxn}}^{\circ}$ and K (18.10)

$$\Delta G_{\text{rxn}}^{\circ} = -RT \ln K$$

The Temperature Dependence of the Equilibrium Constant (18.10)

$$\ln K = -\frac{\Delta H_{\text{rxn}}^{\circ}}{R} \left(\frac{1}{T} \right) + \frac{\Delta S_{\text{rxn}}^{\circ}}{R}$$

$$\ln \frac{K_2}{K_1} = -\frac{\Delta H_{\text{rxn}}^{\circ}}{R} \left(\frac{1}{T_2} - \frac{1}{T_1} \right)$$

EXERCISES

REVIEW QUESTIONS

- What is the first law of thermodynamics, and how does it relate to energy use?
- What is nature's heat tax, and how does it relate to energy use?
- What is a perpetual motion machine? Can such a machine exist given the laws of thermodynamics?
- Is it more efficient to heat your home with a natural gas furnace or an electric furnace? Explain.
- What is a spontaneous process? Provide an example.
- Explain the difference between the spontaneity of a reaction (which depends on thermodynamics) and the speed at which the reaction occurs (which depends on kinetics). Can a catalyst make a nonspontaneous reaction spontaneous?
- What is the precise definition of entropy? What is the significance of entropy being a state function?
- Why does the entropy of a gas increase when it expands into a vacuum?
- Explain the difference between macrostates and microstates.
- Based on its fundamental definition, explain why entropy is a measure of energy dispersion.
- State the second law of thermodynamics. How does the second law explain why heat travels from a substance at higher temperature to one at lower temperature?
- What happens to the entropy of a sample of matter when it changes state from a solid to a liquid? From a liquid to a gas?
- Explain why water spontaneously freezes to form ice below 0°C even though the entropy of the water decreases during the state transition. Why is the freezing of water not spontaneous above 0°C ?
- Why do exothermic processes tend to be spontaneous at low temperatures? Why does their tendency toward spontaneity decrease with increasing temperature?
- What is the significance of the change in Gibbs free energy (ΔG) for a reaction?
- Predict the spontaneity of a reaction (and the temperature dependence of the spontaneity) for each possible combination of signs for ΔH and ΔS (for the system).
 - ΔH negative, ΔS positive
 - ΔH positive, ΔS negative
 - ΔH negative, ΔS negative
 - ΔH positive, ΔS positive
- State the third law of thermodynamics and explain its significance.
- Why is the standard entropy of a substance in the gas state greater than its standard entropy in the liquid state?
- How does the standard entropy of a substance depend on its molar mass? On its molecular complexity?
- How can you calculate the standard entropy change for a reaction from tables of standard entropies?
- Describe the three different methods to calculate ΔG° for a reaction. Which method would you choose to calculate ΔG° for a reaction at a temperature other than 25°C ?

22. Why is free energy “free”?
23. Explain the difference between ΔG° and ΔG .
24. Why does water spilled on the floor evaporate even though ΔG° for the evaporation process is positive at room temperature?

25. How do you calculate the change in free energy for a reaction under nonstandard conditions?
26. How does the value of ΔG° for a reaction relate to the equilibrium constant for the reaction? What does a negative ΔG° for a reaction imply about K for the reaction? A positive ΔG° ?

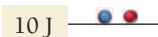
PROBLEMS BY TOPIC

Note: Answers to all odd-numbered Problems, numbered in blue, can be found in Appendix III. Exercises in the Problems by Topic section are paired, with each odd-numbered problem followed by a similar even-numbered problem. Exercises in the Cumulative Problems section are also paired but more loosely. Because of their nature, Challenge Problems and Conceptual Problems are unpaired.



Entropy, the Second Law of Thermodynamics, and the Direction of Spontaneous Change

27. Which of these processes is spontaneous?
- the combustion of natural gas
 - the extraction of iron metal from iron ore
 - a hot drink cooling to room temperature
 - drawing heat energy from the ocean's surface to power a ship
28. Which of these processes are nonspontaneous? Are the nonspontaneous processes impossible?
- a bike going up a hill
 - a meteor falling to Earth
 - obtaining hydrogen gas from liquid water
 - a ball rolling down a hill
29. Suppose that two systems, each composed of two particles represented by circles, have 20 J of total energy. Which system, A or B, has the greater entropy? Why?

System A



System B



30. Suppose two systems, each composed of three particles represented by circles, have 30 J of total energy. In how many energetically equivalent ways can you distribute the particles in each system? Which system has greater entropy?

System A



System B

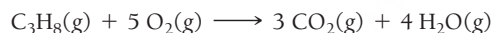


31. Calculate the change in entropy that occurs in the system when 1.00 mole of isopropyl alcohol ($\text{C}_3\text{H}_8\text{O}$) melts at its melting point (-89.5°C). See Table 11.9 for heats of fusion.
32. Calculate the change in entropy that occurs in the system when 1.00 mole of diethyl ether ($\text{C}_4\text{H}_{10}\text{O}$) condenses from a gas to a liquid at its normal boiling point (34.6°C). See Table 11.7 for heats of vaporization.
33. Calculate the change in entropy that occurs in the system when 45.0 g of acetone ($\text{C}_3\text{H}_6\text{O}$) freezes at its melting point (-94.8°C). See Table 11.9 for heats of fusion.
34. Calculate the change in entropy that occurs in the system when 55.0 g of water vaporizes from a liquid to a gas at its boiling point (100.0°C). See Table 11.7 for heats of vaporization.
35. Without doing any calculations, determine the sign of ΔS_{sys} for each chemical reaction.
- $2 \text{KClO}_3(\text{s}) \longrightarrow 2 \text{KCl}(\text{s}) + 3 \text{O}_2(\text{g})$
 - $\text{CH}_2=\text{CH}_2(\text{g}) + \text{H}_2(\text{g}) \longrightarrow \text{CH}_3\text{CH}_3(\text{g})$
 - $\text{Na}(\text{s}) + \frac{1}{2} \text{Cl}_2(\text{g}) \longrightarrow \text{NaCl}(\text{s})$
 - $\text{N}_2(\text{g}) + 3 \text{H}_2(\text{g}) \longrightarrow 2 \text{NH}_3(\text{g})$
36. Without doing any calculations, determine the sign of ΔS_{sys} for each chemical reaction.
- $\text{Mg}(\text{s}) + \text{Cl}_2(\text{g}) \longrightarrow \text{MgCl}_2(\text{s})$
 - $2 \text{H}_2\text{S}(\text{g}) + 3 \text{O}_2(\text{g}) \longrightarrow 2 \text{H}_2\text{O}(\text{g}) + 2 \text{SO}_2(\text{g})$
 - $2 \text{O}_3(\text{g}) \longrightarrow 3 \text{O}_2(\text{g})$
 - $\text{HCl}(\text{g}) + \text{NH}_3(\text{g}) \longrightarrow \text{NH}_4\text{Cl}(\text{s})$
37. Without doing any calculations, determine the sign of ΔS_{sys} and ΔS_{surr} for each chemical reaction. In addition, predict under what temperatures (all temperatures, low temperatures, or high temperatures), if any, the reaction is spontaneous.
- $\text{C}_3\text{H}_8(\text{g}) + 5 \text{O}_2(\text{g}) \longrightarrow 3 \text{CO}_2(\text{g}) + 4 \text{H}_2\text{O}(\text{g})$
 $\Delta H_{\text{rxn}}^\circ = -2044 \text{ kJ}$
 - $\text{N}_2(\text{g}) + \text{O}_2(\text{g}) \longrightarrow 2 \text{NO}(\text{g})$ $\Delta H_{\text{rxn}}^\circ = +182.6 \text{ kJ}$
 - $2 \text{N}_2(\text{g}) + \text{O}_2(\text{g}) \longrightarrow 2 \text{N}_2\text{O}(\text{g})$ $\Delta H_{\text{rxn}}^\circ = +163.2 \text{ kJ}$
 - $4 \text{NH}_3(\text{g}) + 5 \text{O}_2(\text{g}) \longrightarrow 4 \text{NO}(\text{g}) + 6 \text{H}_2\text{O}(\text{g})$
 $\Delta H_{\text{rxn}}^\circ = -906 \text{ kJ}$
38. Without doing any calculations, determine the sign of ΔS_{sys} and ΔS_{surr} for each chemical reaction. In addition, predict under what temperatures (all temperatures, low temperatures, or high temperatures), if any, the reaction is spontaneous.
- $2 \text{CO}(\text{g}) + \text{O}_2(\text{g}) \longrightarrow 2 \text{CO}_2(\text{g})$ $\Delta H_{\text{rxn}}^\circ = -566.0 \text{ kJ}$
 - $2 \text{NO}_2(\text{g}) \longrightarrow 2 \text{NO}(\text{g}) + \text{O}_2(\text{g})$ $\Delta H_{\text{rxn}}^\circ = +113.1 \text{ kJ}$
 - $2 \text{H}_2(\text{g}) + \text{O}_2(\text{g}) \longrightarrow 2 \text{H}_2\text{O}(\text{g})$ $\Delta H_{\text{rxn}}^\circ = -483.6 \text{ kJ}$
 - $\text{CO}_2(\text{g}) \longrightarrow \text{C}(\text{s}) + \text{O}_2(\text{g})$ $\Delta H_{\text{rxn}}^\circ = +393.5 \text{ kJ}$
39. Calculate ΔS_{surr} at the indicated temperature for each reaction.
- $\Delta H_{\text{rxn}}^\circ = -385 \text{ kJ}$; 298 K
 - $\Delta H_{\text{rxn}}^\circ = -385 \text{ kJ}$; 77 K
 - $\Delta H_{\text{rxn}}^\circ = +114 \text{ kJ}$; 298 K
 - $\Delta H_{\text{rxn}}^\circ = +114 \text{ kJ}$; 77 K
40. A reaction has $\Delta H_{\text{rxn}}^\circ = -112 \text{ kJ}$ and $\Delta S_{\text{rxn}}^\circ = 354 \text{ J/K}$. At what temperature is the change in entropy for the reaction equal to the change in entropy for the surroundings?

41. Given the values of $\Delta H_{\text{rxn}}^\circ$, $\Delta S_{\text{rxn}}^\circ$, and T , determine ΔS_{univ} and predict whether each reaction is spontaneous. (Assume that all reactants and products are in their standard states.)
- $\Delta H_{\text{rxn}}^\circ = +115 \text{ kJ}$; $\Delta S_{\text{rxn}}^\circ = -263 \text{ J/K}$; $T = 298 \text{ K}$
 - $\Delta H_{\text{rxn}}^\circ = -115 \text{ kJ}$; $\Delta S_{\text{rxn}}^\circ = +263 \text{ J/K}$; $T = 298 \text{ K}$
 - $\Delta H_{\text{rxn}}^\circ = -115 \text{ kJ}$; $\Delta S_{\text{rxn}}^\circ = -263 \text{ J/K}$; $T = 298 \text{ K}$
 - $\Delta H_{\text{rxn}}^\circ = -115 \text{ kJ}$; $\Delta S_{\text{rxn}}^\circ = -263 \text{ J/K}$; $T = 615 \text{ K}$
42. Given the values of $\Delta H_{\text{rxn}}^\circ$, $\Delta S_{\text{rxn}}^\circ$, and T , determine ΔS_{univ} and predict whether each reaction is spontaneous. (Assume that all reactants and products are in their standard states.)
- $\Delta H_{\text{rxn}}^\circ = -95 \text{ kJ}$; $\Delta S_{\text{rxn}}^\circ = -157 \text{ J/K}$; $T = 298 \text{ K}$
 - $\Delta H_{\text{rxn}}^\circ = -95 \text{ kJ}$; $\Delta S_{\text{rxn}}^\circ = -157 \text{ J/K}$; $T = 855 \text{ K}$
 - $\Delta H_{\text{rxn}}^\circ = +95 \text{ kJ}$; $\Delta S_{\text{rxn}}^\circ = -157 \text{ J/K}$; $T = 298 \text{ K}$
 - $\Delta H_{\text{rxn}}^\circ = -95 \text{ kJ}$; $\Delta S_{\text{rxn}}^\circ = +157 \text{ J/K}$; $T = 398 \text{ K}$

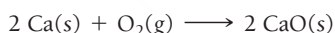
Standard Entropy Changes and Gibbs Free Energy

43. Calculate the change in Gibbs free energy for each set of $\Delta H_{\text{rxn}}^\circ$, $\Delta S_{\text{rxn}}^\circ$, and T given in Problem 41. Predict whether each reaction is spontaneous at the temperature indicated. (Assume that all reactants and products are in their standard states.)
44. Calculate the change in Gibbs free energy for each set of $\Delta H_{\text{rxn}}^\circ$, $\Delta S_{\text{rxn}}^\circ$, and T given in Problem 42. Predict whether each reaction is spontaneous at the temperature indicated. (Assume that all reactants and products are in their standard states.)
45. Calculate the free energy change for this reaction at 25°C . Is the reaction spontaneous?



$$\Delta H_{\text{rxn}}^\circ = -2217 \text{ kJ}; \quad \Delta S_{\text{rxn}}^\circ = 101.1 \text{ J/K}$$

46. Calculate the free energy change for this reaction at 25°C . Is the reaction spontaneous? (Assume that all reactants and products are in their standard states.)



$$\Delta H_{\text{rxn}}^\circ = -1269.8 \text{ kJ}; \quad \Delta S_{\text{rxn}}^\circ = -364.6 \text{ J/K}$$

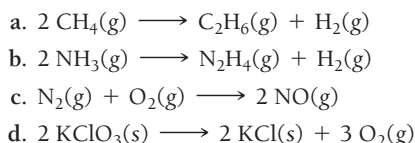
47. Fill in the blanks in the table. Both ΔH and ΔS refer to the system.

ΔH	ΔS	ΔG	Low Temperature	High Temperature
—	+	—	Spontaneous	—
—	—	Temperature dependent	—	—
+	+	—	—	Spontaneous
—	—	—	Nonspontaneous	Nonspontaneous

48. Predict the conditions (high temperature, low temperature, all temperatures, or no temperatures) under which each reaction is spontaneous.
- $\text{H}_2\text{O}(\text{g}) \longrightarrow \text{H}_2\text{O}(\text{l})$
 - $\text{CO}_2(\text{s}) \longrightarrow \text{CO}_2(\text{g})$
 - $\text{H}_2(\text{g}) \longrightarrow 2 \text{H}(\text{g})$
 - $2 \text{NO}_2(\text{g}) \longrightarrow 2 \text{NO}(\text{g}) + \text{O}_2(\text{g})$ (endothermic)
49. How does the molar entropy of a substance change with increasing temperature?
50. What is the molar entropy of a pure crystal at 0 K ? What is the significance of the answer to this question?

51. For each pair of substances, choose the one that you expect to have the higher standard molar entropy (S°) at 25°C . Explain the reasons for your choices.
- $\text{CO}(\text{g})$; $\text{CO}_2(\text{g})$
 - $\text{CH}_3\text{OH}(\text{l})$; $\text{CH}_3\text{OH}(\text{g})$
 - $\text{Ar}(\text{g})$; $\text{CO}_2(\text{g})$
 - $\text{CH}_4(\text{g})$; $\text{SiH}_4(\text{g})$
 - $\text{NO}_2(\text{g})$; $\text{CH}_3\text{CH}_2\text{CH}_3(\text{g})$
 - $\text{NaBr}(\text{s})$; $\text{NaBr}(\text{aq})$
52. For each pair of substances, choose the one that you expect to have the higher standard molar entropy (S°) at 25°C . Explain the reasons for your choices.
- $\text{NaNO}_3(\text{s})$; $\text{NaNO}_3(\text{aq})$
 - $\text{CH}_4(\text{g})$; $\text{CH}_3\text{CH}_3(\text{g})$
 - $\text{Br}_2(\text{l})$; $\text{Br}_2(\text{g})$
 - $\text{Br}_2(\text{g})$; $\text{F}_2(\text{g})$
 - $\text{PCl}_3(\text{g})$; $\text{PCl}_5(\text{g})$
 - $\text{CH}_3\text{CH}_2\text{CH}_2\text{CH}_3(\text{g})$; $\text{SO}_2(\text{g})$
53. Rank each set of substances in order of increasing standard molar entropy (S°). Explain your reasoning.
- $\text{NH}_3(\text{g})$; $\text{Ne}(\text{g})$; $\text{SO}_2(\text{g})$; $\text{CH}_3\text{CH}_2\text{OH}(\text{g})$; $\text{He}(\text{g})$
 - $\text{H}_2\text{O}(\text{s})$; $\text{H}_2\text{O}(\text{l})$; $\text{H}_2\text{O}(\text{g})$
 - $\text{CH}_4(\text{g})$; $\text{CF}_4(\text{g})$; $\text{CCl}_4(\text{g})$
54. Rank each set of substances in order of increasing standard molar entropy (S°). Explain your reasoning.
- $\text{I}_2(\text{s})$; $\text{F}_2(\text{g})$; $\text{Br}_2(\text{g})$; $\text{Cl}_2(\text{g})$
 - $\text{H}_2\text{O}(\text{g})$; $\text{H}_2\text{O}_2(\text{g})$; $\text{H}_2\text{S}(\text{g})$
 - $\text{C}(\text{s, graphite})$; $\text{C}(\text{s, diamond})$; $\text{C}(\text{s, amorphous})$
55. Use data from Appendix IIB to calculate $\Delta S_{\text{rxn}}^\circ$ for each of the reactions. In each case, try to rationalize the sign of $\Delta S_{\text{rxn}}^\circ$.
- $\text{C}_2\text{H}_4(\text{g}) + \text{H}_2(\text{g}) \longrightarrow \text{C}_2\text{H}_6(\text{g})$
 - $\text{C}(\text{s}) + \text{H}_2\text{O}(\text{g}) \longrightarrow \text{CO}(\text{g}) + \text{H}_2(\text{g})$
 - $\text{CO}(\text{g}) + \text{H}_2\text{O}(\text{g}) \longrightarrow \text{H}_2(\text{g}) + \text{CO}_2(\text{g})$
 - $2 \text{H}_2\text{S}(\text{g}) + 3 \text{O}_2(\text{g}) \longrightarrow 2 \text{H}_2\text{O}(\text{l}) + 2 \text{SO}_2(\text{g})$
56. Use data from Appendix IIB to calculate $\Delta S_{\text{rxn}}^\circ$ for each of the reactions. In each case, try to rationalize the sign of $\Delta H_{\text{rxn}}^\circ$.
- $3 \text{NO}_2(\text{g}) + \text{H}_2\text{O}(\text{l}) \longrightarrow 2 \text{HNO}_3(\text{aq}) + \text{NO}(\text{g})$
 - $\text{Cr}_2\text{O}_3(\text{s}) + 3 \text{CO}(\text{g}) \longrightarrow 2 \text{Cr}(\text{s}) + 3 \text{CO}_2(\text{g})$
 - $\text{SO}_2(\text{g}) + \frac{1}{2} \text{O}_2(\text{g}) \longrightarrow \text{SO}_3(\text{g})$
 - $\text{N}_2\text{O}_4(\text{g}) + 4 \text{H}_2(\text{g}) \longrightarrow \text{N}_2(\text{g}) + 4 \text{H}_2\text{O}(\text{g})$
57. Find ΔS° for the formation of $\text{CH}_2\text{Cl}_2(\text{g})$ from its gaseous elements in their standard states. Rationalize the sign of ΔS° .
58. Find ΔS° for the reaction between nitrogen gas and fluorine gas to form nitrogen trifluoride gas. Rationalize the sign of ΔS° .
59. Methanol burns in oxygen to form carbon dioxide and water. Write a balanced equation for the combustion of liquid methanol and calculate $\Delta H_{\text{rxn}}^\circ$, $\Delta S_{\text{rxn}}^\circ$, and $\Delta G_{\text{rxn}}^\circ$ at 25°C . Is the combustion of methanol spontaneous?
60. In photosynthesis, plants form glucose ($\text{C}_6\text{H}_{12}\text{O}_6$) and oxygen from carbon dioxide and water. Write a balanced equation for photosynthesis and calculate $\Delta H_{\text{rxn}}^\circ$, $\Delta S_{\text{rxn}}^\circ$, and $\Delta G_{\text{rxn}}^\circ$ at 25°C . Is photosynthesis spontaneous?
61. For each reaction, calculate $\Delta H_{\text{rxn}}^\circ$, $\Delta S_{\text{rxn}}^\circ$, and $\Delta G_{\text{rxn}}^\circ$ at 25°C and state whether the reaction is spontaneous. If the reaction is not spontaneous, would a change in temperature make it spontaneous? If so, should the temperature be raised or lowered from 25°C ?
- $\text{N}_2\text{O}_4(\text{g}) \longrightarrow 2 \text{NO}_2(\text{g})$
 - $\text{NH}_4\text{Cl}(\text{s}) \longrightarrow \text{HCl}(\text{g}) + \text{NH}_3(\text{g})$
 - $3 \text{H}_2(\text{g}) + \text{Fe}_2\text{O}_3(\text{s}) \longrightarrow 2 \text{Fe}(\text{s}) + 3 \text{H}_2\text{O}(\text{g})$
 - $\text{N}_2(\text{g}) + 3 \text{H}_2(\text{g}) \longrightarrow 2 \text{NH}_3(\text{g})$

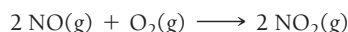
62. For each reaction, calculate $\Delta H^\circ_{\text{rxn}}$, $\Delta S^\circ_{\text{rxn}}$, and $\Delta G^\circ_{\text{rxn}}$ at 25°C and state whether the reaction is spontaneous. If the reaction is not spontaneous, would a change in temperature make it spontaneous? If so, should the temperature be raised or lowered from 25°C?



63. Use standard free energies of formation to calculate ΔG° at 25°C for each reaction in Problem 61. How do the values of ΔG° calculated this way compare to those calculated from ΔH° and ΔS° ? Which of the two methods could be used to determine how ΔG° changes with temperature?

64. Use standard free energies of formation to calculate ΔG° at 25°C for each reaction in Problem 62. How well do the values of ΔG° calculated this way compare to those calculated from ΔH° and ΔS° ? Which of the two methods could be used to determine how ΔG° changes with temperature?

65. Consider the reaction:



Estimate ΔG° for this reaction at each temperature and predict whether the reaction is spontaneous. (Assume that ΔH° and ΔS° do not change too much within the given temperature range.)

- a. 298 K b. 715 K c. 855 K

66. Consider the reaction:



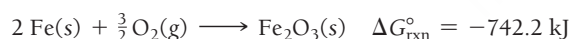
Estimate ΔG° for this reaction at each temperature and predict whether the reaction is spontaneous. (Assume that ΔH° and ΔS° do not change too much within the given temperature range.)

- a. 298 K b. 1055 K c. 1455 K

67. Determine ΔG° for the reaction:



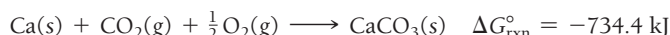
Use the following reactions with known $\Delta G^\circ_{\text{rxn}}$ values:



68. Calculate $\Delta G^\circ_{\text{rxn}}$ for the reaction:




Use the following reactions and given $\Delta G^\circ_{\text{rxn}}$ values:




Free Energy Changes, Nonstandard Conditions, and the Equilibrium Constant

69. Consider the sublimation of iodine at 25.0°C :



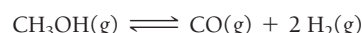
- a. Find $\Delta G^\circ_{\text{rxn}}$ at 25.0°C.
 b. Find ΔG_{rxn} at 25.0°C under the following nonstandard conditions:
 i. $P_{\text{I}_2} = 1.00 \text{ mmHg}$
 ii. $P_{\text{I}_2} = 0.100 \text{ mmHg}$
 c. Explain why iodine spontaneously sublimates in open air at 25°C.

70. Consider the evaporation of methanol at 25.0°C.



- a. Find $\Delta G^\circ_{\text{rxn}}$ at 25.0°C.
 b. Find ΔG_{rxn} at 25.0°C under the following nonstandard conditions:
 i. $P_{\text{CH}_3\text{OH}} = 150.0 \text{ mmHg}$
 ii. $P_{\text{CH}_3\text{OH}} = 100.0 \text{ mmHg}$
 iii. $P_{\text{CH}_3\text{OH}} = 10.0 \text{ mmHg}$
 c. Explain why methanol spontaneously evaporates in open air at 25.0°C.

71. Consider the reaction:



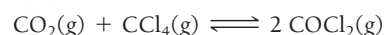
Calculate ΔG for this reaction at 25°C under the following conditions:

$$P_{\text{CH}_3\text{OH}} = 0.855 \text{ atm}$$

$$P_{\text{CO}} = 0.125 \text{ atm}$$

$$P_{\text{H}_2} = 0.183 \text{ atm}$$

72. Consider the reaction:



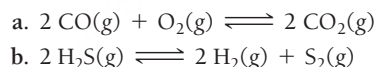
Calculate ΔG for this reaction at 25°C under the following conditions:

$$P_{\text{CO}_2} = 0.112 \text{ atm}$$

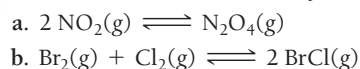
$$P_{\text{CCl}_4} = 0.174 \text{ atm}$$

$$P_{\text{COCl}_2} = 0.744 \text{ atm}$$

73. Use data from Appendix IIB to calculate the equilibrium constant at 25°C for each reaction.



74. Use data from Appendix IIB to calculate the equilibrium constant at 25°C for each reaction. ΔG°_f for $\text{BrCl}(\text{g})$ is -1.0 kJ/mol .



75. Consider the reaction:



Calculate ΔG_{rxn} for the reaction at 25°C under the following conditions:

- a. standard conditions
 b. at equilibrium
 c. $P_{\text{CH}_3\text{OH}} = 1.0 \text{ atm}$; $P_{\text{CO}} = P_{\text{H}_2} = 0.010 \text{ atm}$

76. Consider the reaction:



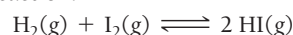
Calculate ΔG_{rxn} for the reaction at 25°C under the following conditions:

- a. standard conditions
 b. at equilibrium
 c. $P_{\text{ICl}} = 2.55 \text{ atm}$; $P_{\text{I}_2} = 0.325 \text{ atm}$; $P_{\text{Cl}_2} = 0.221 \text{ atm}$

77. Estimate the value of the equilibrium constant at 525 K for each reaction in Problem 73.

78. Estimate the value of the equilibrium constant at 655 K for each reaction in Problem 74. (ΔH°_f for BrCl is 14.6 kJ/mol .)

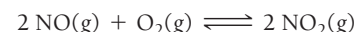
79. Consider the reaction:



The following data show the equilibrium constant for this reaction measured at several different temperatures. Use the data to find $\Delta H_{\text{rxn}}^\circ$ and $\Delta S_{\text{rxn}}^\circ$ for the reaction.

Temperature	K_p
150 K	1.4×10^{-6}
175 K	4.6×10^{-4}
200 K	3.6×10^{-2}
225 K	1.1
250 K	15.5

80. Consider the reaction:



The following data show the equilibrium constant for this reaction measured at several different temperatures. Use the data to find $\Delta H_{\text{rxn}}^\circ$ and $\Delta S_{\text{rxn}}^\circ$ for the reaction.

Temperature	K_p
170 K	3.8×10^{-3}
180 K	0.34
190 K	18.4
200 K	681


81. The change in enthalpy ($\Delta H_{\text{rxn}}^\circ$) for a reaction is -25.8 kJ/mol . The equilibrium constant for the reaction is 1.4×10^3 at 298 K. What is the equilibrium constant for the reaction at 655 K?
82. A reaction has an equilibrium constant of 8.5×10^3 at 298 K. At 755 K, the equilibrium constant is 0.65. Find $\Delta H_{\text{rxn}}^\circ$ for the reaction.

CUMULATIVE PROBLEMS

83. Determine the sign of
- ΔS_{sys}
- for each process.

- a. water boiling
b. water freezing


c.



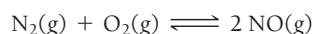
84. Determine the sign of
- ΔS_{sys}
- for each process.

- a. dry ice subliming
b. dew forming

c.

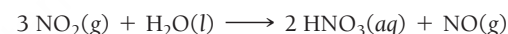


85. Our atmosphere is composed primarily of nitrogen and oxygen, which coexist at 25°C without reacting to any significant extent. However, the two gases can react to form nitrogen monoxide according to the reaction:

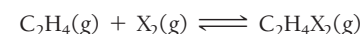


- a. Calculate ΔG° and K_p for this reaction at 298 K. Is the reaction spontaneous?
- b. Estimate ΔG° at 2000 K. Does the reaction become more spontaneous as temperature increases?
86. Nitrogen dioxide, a pollutant in the atmosphere, can combine with water to form nitric acid. One of the possible reactions is

shown here. Calculate ΔG° and K_p for this reaction at 25°C and comment on the spontaneity of the reaction.



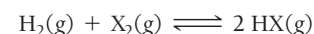
87. Ethene (
- C_2H_4
-) can be halogenated by the reaction:



where X_2 can be Cl_2 , Br_2 , or I_2 . Use the thermodynamic data given to calculate ΔH° , ΔS° , ΔG° , and K_p for the halogenation reaction by each of the three halogens at 25°C . Which reaction is most spontaneous? Least spontaneous? What is the main factor responsible for the difference in the spontaneity of the three reactions? Does higher temperature make the reactions more spontaneous or less spontaneous?

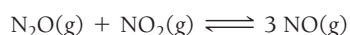
Compound	$\Delta H_f^\circ (\text{kJ/mol})$	$S^\circ (\text{J/mol} \cdot \text{K})$
$\text{C}_2\text{H}_4\text{Cl}_2(\text{g})$	-129.7	308.0
$\text{C}_2\text{H}_4\text{Br}_2(\text{g})$	+38.3	330.6
$\text{C}_2\text{H}_4\text{I}_2(\text{g})$	+66.5	347.8

- 88.
- H_2
- reacts with the halogens (
- X_2
-) according to the reaction:



where X_2 can be Cl_2 , Br_2 , or I_2 . Use the thermodynamic data in Appendix IIB to calculate ΔH° , ΔS° , ΔG° , and K_p for the reaction between hydrogen and each of the three halogens. Which reaction is most spontaneous? Least spontaneous? What is the main factor responsible for the difference in the spontaneity of the three reactions? Does higher temperature make the reactions more spontaneous or less spontaneous?

89. Consider this reaction occurring at 298 K:



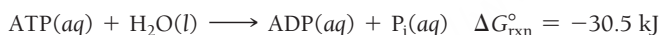
- Show that the reaction is not spontaneous under standard conditions by calculating $\Delta G_{\text{rxn}}^\circ$.
- If a reaction mixture contains only N_2O and NO_2 at partial pressures of 1.0 atm each, the reaction will be spontaneous until some NO forms in the mixture. What maximum partial pressure of NO builds up before the reaction ceases to be spontaneous?
- Can the reaction be made more spontaneous by an increase or decrease in temperature? If so, what temperature is required to make the reaction spontaneous under standard conditions?

90. Consider this reaction occurring at 298 K:



- Show that the reaction is not spontaneous under standard conditions by calculating $\Delta G_{\text{rxn}}^\circ$.
- If BaCO_3 is placed in an evacuated flask, what is the partial pressure of CO_2 when the reaction reaches equilibrium?
- Can the reaction be made more spontaneous by an increase or decrease in temperature? If so, at what temperature is the partial pressure of carbon dioxide 1.0 atm?

91. Living organisms use energy from the metabolism of food to create an energy-rich molecule called adenosine triphosphate (ATP). The ATP then acts as an energy source for a variety of reactions that the living organism must carry out to survive. ATP provides energy through its hydrolysis, which can be symbolized as follows:



where ADP represents adenosine diphosphate and P_i represents an inorganic phosphate group (such as HPO_4^{2-}).

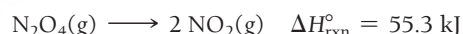
- Calculate the equilibrium constant, K , for the given reaction at 298 K.
 - The free energy obtained from the oxidation (reaction with oxygen) of glucose ($\text{C}_6\text{H}_{12}\text{O}_6$) to form carbon dioxide and water can be used to re-form ATP by driving the given reaction in reverse. Calculate the standard free energy change for the oxidation of glucose and estimate the maximum number of moles of ATP that can be formed by the oxidation of one mole of glucose.
92. The standard free energy change for the hydrolysis of ATP was given in Problem 91. In a particular cell, the concentrations of ATP, ADP, and P_i are 0.0031 M, 0.0014 M, and 0.0048 M, respectively. Calculate the free energy change for the hydrolysis of ATP under these conditions. (Assume a temperature of 298 K.)
93. These reactions are important in catalytic converters in automobiles. Calculate ΔG° for each at 298 K. Predict the effect of increasing temperature on the magnitude of ΔG° .
- $2 \text{CO}(\text{g}) + 2 \text{NO}(\text{g}) \longrightarrow \text{N}_2(\text{g}) + 2 \text{CO}_2(\text{g})$
 - $5 \text{H}_2(\text{g}) + 2 \text{NO}(\text{g}) \longrightarrow 2 \text{NH}_3(\text{g}) + 2 \text{H}_2\text{O}(\text{g})$
 - $2 \text{H}_2(\text{g}) + 2 \text{NO}(\text{g}) \longrightarrow \text{N}_2(\text{g}) + 2 \text{H}_2\text{O}(\text{g})$
 - $2 \text{NH}_3(\text{g}) + 2 \text{O}_2(\text{g}) \longrightarrow \text{N}_2\text{O}(\text{g}) + 3 \text{H}_2\text{O}(\text{g})$

94. Calculate
- ΔG°
- at 298 K for these reactions and predict the effect on
- ΔG°
- of lowering the temperature.

- $\text{NH}_3(\text{g}) + \text{HBr}(\text{g}) \longrightarrow \text{NH}_4\text{Br}(\text{s})$
- $\text{CaCO}_3(\text{s}) \longrightarrow \text{CaO}(\text{s}) + \text{CO}_2(\text{g})$
- $\text{CH}_4(\text{g}) + 3 \text{Cl}_2(\text{g}) \longrightarrow \text{CHCl}_3(\text{g}) + 3 \text{HCl}(\text{g})$
(ΔG_f° for $\text{CHCl}_3(\text{g})$ is -70.4 kJ/mol .)

95. All the oxides of nitrogen have positive values of ΔG_f° at 298 K, but only one common oxide of nitrogen has a positive ΔS_f° . Identify that oxide of nitrogen without reference to thermodynamic data and explain.
96. The values of ΔG_f° for the hydrogen halides become less negative with increasing atomic number. The ΔG_f° of HI is slightly positive. On the other hand, the trend in ΔS_f° is to become more positive with increasing atomic number. Explain.
97. Consider the reaction $\text{X}_2(\text{g}) \longrightarrow 2 \text{X}(\text{g})$. When a vessel initially containing 755 torr of X_2 comes to equilibrium at 298 K, the equilibrium partial pressure of X is 103 torr. The same reaction is repeated with an initial partial pressure of 748 torr of X_2 at 755 K; the equilibrium partial pressure of X is 532 torr. Find ΔH° for the reaction.

98. Dinitrogen tetroxide decomposes to nitrogen dioxide:

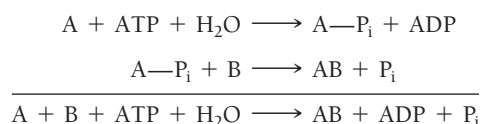


At 298 K, a reaction vessel initially contains 0.100 atm of N_2O_4 . When equilibrium is reached, 58% of the N_2O_4 has decomposed to NO_2 . What percentage of N_2O_4 decomposes at 388 K? Assume that the initial pressure of N_2O_4 is the same (0.100 atm).

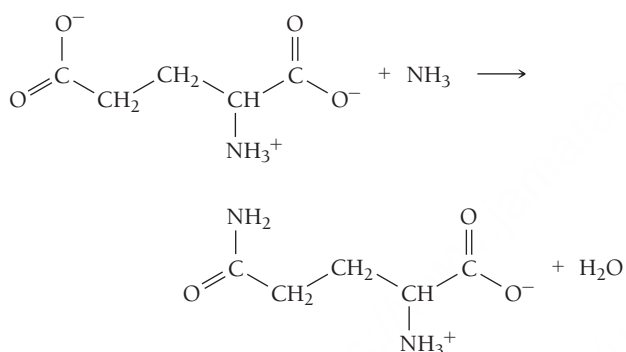
99. Indicate and explain the sign of ΔS_{univ} for each process.
- $2 \text{H}_2(\text{g}) + \text{O}_2(\text{g}) \longrightarrow 2 \text{H}_2\text{O}(\text{l})$ at 298 K
 - the electrolysis of $\text{H}_2\text{O}(\text{l})$ to $\text{H}_2(\text{g})$ and $\text{O}_2(\text{g})$ at 298 K
 - the growth of an oak tree from an acorn
100. The Haber process is very important for agriculture because it converts $\text{N}_2(\text{g})$ from the atmosphere into bound nitrogen, which can be taken up and used by plants. The Haber process reaction is $\text{N}_2(\text{g}) + 3 \text{H}_2(\text{g}) \rightleftharpoons 2 \text{NH}_3(\text{g})$. The reaction is exothermic but is carried out at relatively high temperatures. Why?
101. A metal salt with the formula MCl_2 crystallizes from water to form a solid with the composition $\text{MCl}_2 \cdot 6 \text{H}_2\text{O}$. The equilibrium vapor pressure of water above this solid at 298 K is 18.3 mmHg. What is the value of ΔG for the reaction $\text{MCl}_2 \cdot 6 \text{H}_2\text{O}(\text{s}) \rightleftharpoons \text{MCl}_2(\text{s}) + 6 \text{H}_2\text{O}(\text{g})$ when the pressure of water vapor is 18.3 mmHg? When the pressure of water vapor is 760.0 mmHg?
102. The solubility of $\text{AgCl}(\text{s})$ in water at 25°C is $1.33 \times 10^{-5} \text{ mol/L}$, and its ΔH° of solution is 65.7 kJ/mol . What is its solubility at 50.0°C ?

CHALLENGE PROBLEMS

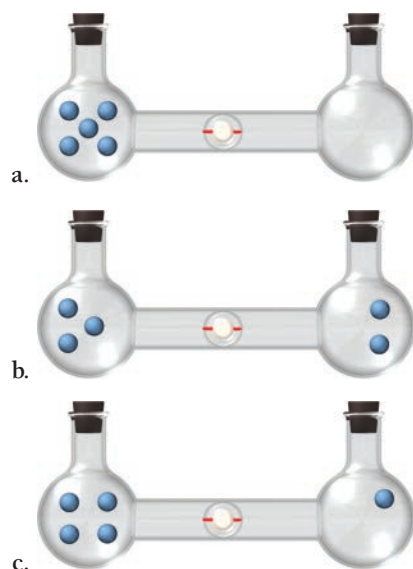
103. Review the subsection in this chapter entitled *Making a Nonspontaneous Process Spontaneous* in Section 18.8. The hydrolysis of ATP, shown in Problem 91, is often used to drive nonspontaneous processes—such as muscle contraction and protein synthesis—in living organisms. The nonspontaneous process to be driven must be coupled to the ATP hydrolysis reaction. For example, suppose the nonspontaneous process is $A + B \longrightarrow AB$ (ΔG° positive). The coupling of a nonspontaneous reaction such as this one to the hydrolysis of ATP is often accomplished by the mechanism:



As long as ΔG_{rxn} for the nonspontaneous reaction is less than 30.5 kJ, the reaction can be made spontaneous by coupling in this way to the hydrolysis of ATP. Suppose that ATP is to drive the reaction between glutamate and ammonia to form glutamine:



- Calculate K for the reaction between glutamate and ammonia. (The standard free energy change for the reaction is +14.2 kJ/mol. Assume a temperature of 298 K.)
 - Write a set of reactions such as those given showing how the glutamate and ammonia reaction can couple with the hydrolysis of ATP. What is $\Delta G_{\text{rxn}}^\circ$ and K for the coupled reaction?
104. Calculate the entropy of each state and rank the states in order of increasing entropy.



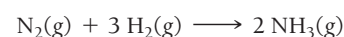
105. Suppose we redefine the standard state as $P = 2$ atm. Find the new standard ΔG_f° values of each substance.

- HCl(g)
- $\text{N}_2\text{O(g)}$
- H(g)

Explain the results in terms of the relative entropies of reactants and products of each reaction.

106. The ΔG for the freezing of $\text{H}_2\text{O(l)}$ at -10°C is -210 J/mol, and the heat of fusion of ice at this temperature is 5610 J/mol. Find the entropy change of the universe when 1 mol of water freezes at -10°C .

107. Consider the reaction that occurs during the Haber process:



The equilibrium constant is 3.9×10^5 at 300 K and 1.2×10^{-1} at 500 K. Calculate $\Delta H_{\text{rxn}}^\circ$ and $\Delta S_{\text{rxn}}^\circ$ for this reaction.

108. The salt ammonium nitrate can follow three modes of decomposition: (a) to $\text{HNO}_3(\text{g})$ and $\text{NH}_3(\text{g})$, (b) to $\text{N}_2\text{O(g)}$ and $\text{H}_2\text{O(g)}$, and (c) to $\text{N}_2(\text{g})$, $\text{O}_2(\text{g})$, and $\text{H}_2\text{O(g)}$. Calculate $\Delta G_{\text{rxn}}^\circ$ for each mode of decomposition at 298 K. Explain in light of these results how it is still possible to use ammonium nitrate as a fertilizer and the precautions that should be taken when it is used.

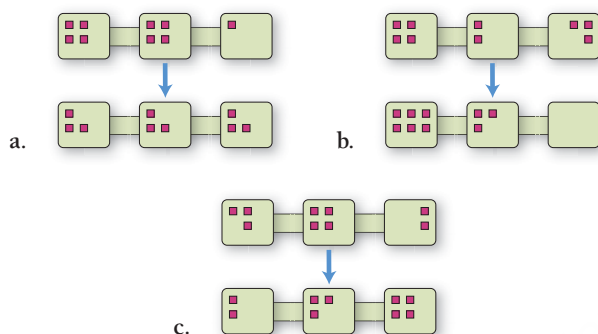
109. Given the tabulated data, calculate ΔS_{vap} for each of the first four liquids. ($\Delta S_{\text{vap}} = \Delta H_{\text{vap}}/T$, where T is in K)

Compound	Name	bp ($^\circ\text{C}$)	ΔH_{vap} (kJ/mol) at bp
$\text{C}_4\text{H}_{10}\text{O}$	Diethyl ether	34.6	26.5
C_3H_6	Acetone	56.1	29.1
C_6H_6	Benzene	79.8	30.8
CHCl_3	Chloroform	60.8	29.4
$\text{C}_2\text{H}_5\text{OH}$	Ethanol	77.8	38.6
H_2O	Water	100.0	40.7

All four values should be close to each other. Predict whether the last two liquids in the table have ΔS_{vap} in this same range. If not, predict whether it is larger or smaller and explain. Verify your prediction.

CONCEPTUAL PROBLEMS

110. Which statement is true?
- A spontaneous reaction is always a fast reaction.
 - A spontaneous reaction is always a slow reaction.
 - The spontaneity of a reaction is not necessarily related to the speed of a reaction.
111. Which process is necessarily driven by an increase in the entropy of the surroundings?
- the condensation of water
 - the sublimation of dry ice
 - the freezing of water
112. Consider the changes in the distribution of nine particles into three interconnected boxes shown here. Which has the most negative ΔS ?



113. Which statement is true?
- A reaction in which the entropy of the system increases can be spontaneous only if it is exothermic.
 - A reaction in which the entropy of the system increases can be spontaneous only if it is endothermic.
 - A reaction in which the entropy of the system decreases can be spontaneous only if it is exothermic.
114. Which process is spontaneous at 298 K?
- $\text{H}_2\text{O}(l) \longrightarrow \text{H}_2\text{O}(g, 1 \text{ atm})$
 - $\text{H}_2\text{O}(l) \longrightarrow \text{H}_2\text{O}(g, 0.10 \text{ atm})$
 - $\text{H}_2\text{O}(l) \longrightarrow \text{H}_2\text{O}(g, 0.010 \text{ atm})$
115. The free energy change of the reaction $\text{A}(g) \longrightarrow \text{B}(g)$ is zero under certain conditions. The *standard* free energy change of the reaction is -42.5 kJ . Which statement must be true about the reaction?
- The concentration of the product is greater than the concentration of the reactant.
 - The reaction is at equilibrium.
 - The concentration of the reactant is greater than the concentration of the product.
116. The reaction $\text{A}(g) \rightleftharpoons \text{B}(g)$ has an equilibrium constant of 5.8 and under certain conditions has $Q = 336$. What can you conclude about the sign of $\Delta G_{\text{rxn}}^\circ$ and ΔG_{rxn} for this reaction under these conditions?

QUESTIONS FOR GROUP WORK

Discuss these questions with the group and record your consensus answer.

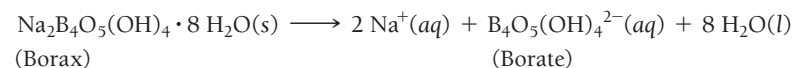
117. Imagine that you roll two dice. Write down all the possible rolls that sum to 2. Write all the possible rolls that sum to 12. Write all the possible rolls that sum to 7. Which configuration has the greatest entropy: 2, 12, or 7?
118. If you roll one million dice, what will be the average of all the dice? If there is a room with one million dice and they all have a 1 on the top face, and there is an earthquake strong enough to roll dice around, what is the likelihood that after the earthquake all the top faces will sum to one million? To six million? How does this thought experiment illustrate the second law of thermodynamics?

Active Classroom Learning

119. Not all processes in which the system increases in entropy are spontaneous. How can this observation be consistent with the second law? Provide an example and explain your answer in complete sentences.
120. Have each group member look up ΔH_f° and S° for one substance in the reaction: $3 \text{ O}_2(g) + 6 \text{ H}_2(g) + 6 \text{ C}(s, \text{graphite}) \longrightarrow \text{C}_6\text{H}_{12}\text{O}_6(s, \text{glucose})$. What is ΔH° for this reaction? What is ΔS° ? When is ΔH_f° for a substance equal to zero? When is S° for a substance equal to zero?
121. Calculate ΔG° at 25°C for the reaction in the previous question. Is this reaction spontaneous under standard conditions? How do you know? What is the determining factor: the change in energy or the change in entropy or both? Explain.

DATA INTERPRETATION AND ANALYSIS

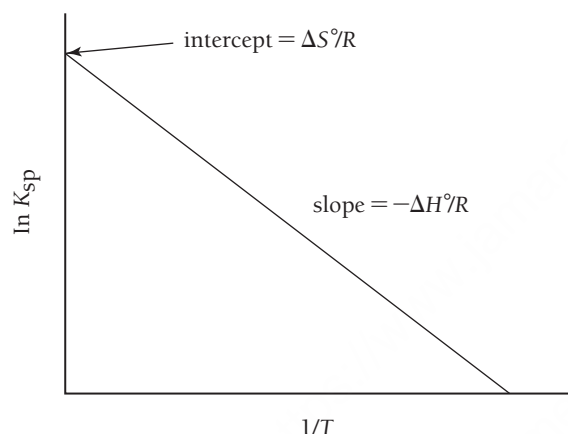
122. Borax, sodium tetraborate decahydrate, is an important mineral found in dry lakebeds in California. It is used to make soap and glass, and used as a preservative. You can use the values of K_{sp} of borax at different temperatures to determine ΔH° , ΔS° , and ΔG° for the dissolution of borax:



The relationship:

$$\ln(K_{sp}) = \frac{-\Delta H^\circ}{RT} + \frac{\Delta S^\circ}{R}$$

has the form of a linear equation $y = mx + b$, where y is the $\ln K_{sp}$ and x is $1/T$. The slope is equal to $(-\Delta H^\circ/R)$, and the y intercept is $\Delta S^\circ/R$, where R is the gas constant, 8.314 J/K mol . If you measure K_{sp} at several different temperatures, you can plot the $\ln K$ versus $1/T$ (T in kelvin) as shown here.



Knowing the values of ΔH° and ΔS° at a specific temperature allows the calculation of the change in Gibbs free energy for the reaction: $\Delta G^\circ = \Delta H^\circ - T\Delta S^\circ$.

The following table lists K_{sp} values for the dissolution of borax at several temperatures ($^\circ\text{C}$).

K_{sp} Values for the Dissolution of Borax at Several Temperatures ($^\circ\text{C}$).

Temperature ($^\circ\text{C}$)	K_{sp}
40.0	0.041
45.0	0.083
50.0	0.264
55.0	0.486
60.0	0.552

- Plot a graph of $\ln K_{sp}$ versus $1/T$ (T in kelvin) and find the best-fitting line.
- Determine ΔH° . Is this process endothermic or exothermic?
- Determine ΔS° .
- Determine ΔG° at 298 K.
- Sketch a graph of $\ln K$ versus $1/T$ for an exothermic process.

◀ A Plot of $\ln K_{sp}$ versus $1/T$ where the Units of Temperature Are in Kelvin.

ANSWERS TO CONCEPTUAL CONNECTIONS

- Cc 18.1 (a) The more spread out the particles are between the three boxes, the greater the entropy. Therefore, the entropy change is positive only in scheme (a).
- Cc 18.2 Biological systems do not violate the second law of thermodynamics. The key to understanding this concept is realizing that entropy changes in the system can be negative as long as the entropy change of the universe is positive. Biological systems can decrease their own entropy, but only at the expense of creating more entropy in the surroundings (which they do primarily by emitting the heat they generate by their metabolic processes). Thus, for any biological process, ΔS_{univ} is positive.
- Cc 18.3 (a) Sublimation is endothermic (it requires energy to overcome the intermolecular forces that hold solid carbon dioxide together), so ΔH is positive. The number of moles of gas increases when the solid turns into a gas, so the entropy of the carbon dioxide increases and ΔS is positive.

Since $\Delta G = \Delta H - T\Delta S$, ΔG is positive at low temperature and negative at high temperature.

- Cc 18.4 $\text{Kr} < \text{Cl}_2 < \text{SO}_3$. Because krypton is a monoatomic gas, it has the least entropy. Because SO_3 is the most complex molecule, it has the most entropy. The molar masses of the three gases vary slightly, but not enough to overcome the differences in molecular complexity.
- Cc 18.5 (a) A high concentration of reactants relative to products will lead to $Q < 1$, making the term $RT \ln Q$ in Equation 18.14 negative. ΔG_{rxn} is more negative than ΔG_{rxn}° , and the reaction is more spontaneous.
- Cc 18.6 (c) Since the equilibrium constant is less than 1, the reaction proceeds toward reactants under standard conditions (when $Q = 1$). Therefore, ΔG_{rxn}° is positive.
- Cc 18.7 $\Delta G_{rxn} < 0$, $Q < K$

19.1 Lightning and Batteries 845

19.2 Balancing Oxidation–Reduction Equations 846

19.3 Voltaic (or Galvanic) Cells: Generating Electricity from Spontaneous Chemical Reactions 849

19.4 Standard Electrode Potentials 854

19.5 Cell Potential, Free Energy, and the Equilibrium Constant 861

19.6 Cell Potential and Concentration 865

19.7 Batteries: Using Chemistry to Generate Electricity 870

19.8 Electrolysis: Driving Nonspontaneous Chemical Reactions with Electricity 872

19.9 Corrosion: Undesirable Redox Reactions 879

Key Learning Outcomes 883



Lightning is a massive flow of electrical charge from the base of a thundercloud to the ground. In a battery, charge flows in a more controlled fashion but is driven by the same principle.

Electrochemistry

SOME CHEMICAL REACTIONS RESULT IN THE TRANSFER OF ELECTRONS from one substance to another. We first encountered these

kinds of reactions—called oxidation–reduction or redox reactions—in Chapter 8. In an oxidation–reduction reaction, one substance loses electrons and another substance gains them. If we physically separate the reactants in an oxidation–reduction reaction from one another, we can force the electrons to travel through a metal wire in order to get from one reactant

to the other. The moving electrons constitute an electrical current. In this way, we can employ the electron-gaining tendency of one substance and the electron-losing tendency of another to force electrons to move through a wire to create electricity. The end result is a battery—a portable source of electrical current. The generation of electricity from spontaneous redox reactions (such as those that occur in a battery) and the use of electricity to drive nonspontaneous redox reactions (such as those that occur in gold or silver plating) are examples of electrochemistry, the subject of this chapter.

“... each metal has a certain power, which is different from metal to metal, of setting the electric fluid in motion . . .”

—Alessandro Volta (1745–1827)

19.1 Lightning and Batteries

Lightning dramatically demonstrates the power of the flow of electrical charge. Many of the same principles, although in a much more controlled environment, are at work in a standard flashlight battery. The driving force for both lightning and the battery is the same, and we have encountered it before: electrons flow away from negative charge and toward *positive* charge.

In a thundercloud, violent air currents cause water droplets and ice particles to collide. The collisions knock electrons off of molecules, creating positive and negative charges. The positive charges accumulate on small ice crystals that travel to the top of the thundercloud on rising air currents. The wet slushy bottom of the thundercloud becomes negatively charged. The resulting charge separation exists until a

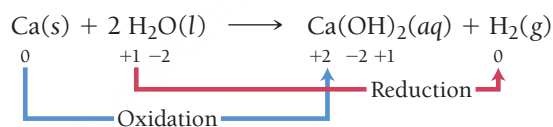
conductive path can form between the bottom of the cloud (negatively charged) and the top of the cloud (positively charged). The conductive path forms when the charge separation is so great that a channel of ionized air develops. This channel acts like a conductive wire, allowing a massive amount of charge to flow through it in order to equalize the charge separation. The massive flow of electrical charge is lightning.

Most lightning occurs within the thundercloud itself or from one thundercloud to another. However, if the thundercloud gets close enough to the ground, the earth underneath the cloud develops a positive charge in response to the negative charge at the base of the cloud. The channel of ionized air can then form between the cloud and the ground, resulting in the flow of charge from the base of the cloud to the earth in what is called cloud-to-ground lightning. Cloud-to-ground lightning is visible and dramatic to observers on the ground.

Batteries operate on many of the same principles at work in lightning. A battery is composed of substances that have different affinities for electrons. The substances are separated so that one end of the battery develops a positive charge and the other end develops a negative charge. The charge separation exists until a conductive path connects the two ends, providing a path through which charge can flow. A metal wire, with a light bulb in line, can provide such a path. When the wire is connected, electrons flow from the negative end of the battery—through the wire and through the light bulb—to the positive end. As the electrons flow through the filament of the light bulb, they create heat and light, much like the flow of electrons from a thundercloud to the earth produces heat and light in a much more dramatic form.

19.2 Balancing Oxidation–Reduction Equations

The reactions that create the flow of electric charge within a battery are oxidation–reduction (redox) reactions. Recall from Section 8.9 that *oxidation* is the loss of electrons, and *reduction* is the gain of electrons. Recall also that we identify oxidation–reduction reactions through changes in oxidation states: *oxidation corresponds to an increase in oxidation state, and reduction corresponds to a decrease in oxidation state*. For example, consider the reaction between calcium and water:



Review assigning oxidation states in Section 8.9.

Because calcium increases in oxidation state from 0 to +2, it is oxidized. Because hydrogen decreases in oxidation state from +1 to 0, it is reduced.

Balancing redox reactions can be more complicated than balancing other types of reactions because we must balance both the mass (or number of each type of atom) and the *charge*. We can balance redox reactions occurring in aqueous solutions with a special procedure called the *half-reaction method of balancing*. In this procedure, we break down the overall equation into two half-reactions: one for oxidation and one for reduction. We then balance the half-reactions individually and add them together. The steps differ slightly for reactions occurring in acidic and in basic solution. Examples 19.1 and 19.2 demonstrate the method for an acidic solution, and Example 19.3 demonstrates the method for a basic solution.

Interactive Worked
Example Video 19.2



EXAMPLE 19.1

EXAMPLE 19.2

PROCEDURE FOR Half-Reaction Method of Balancing Aqueous Redox Equations in Acidic Solution	Half-Reaction Method of Balancing Aqueous Redox Equations in Acidic Solution	Half-Reaction Method of Balancing Aqueous Redox Equations in Acidic Solution
GENERAL PROCEDURE	Balance the redox equation. $\text{Al(s)} + \text{Cu}^{2+}(\text{aq}) \longrightarrow \text{Al}^{3+}(\text{aq}) + \text{Cu(s)}$	Balance the redox equation. $\text{Fe}^{2+}(\text{aq}) + \text{MnO}_4^{-}(\text{aq}) \longrightarrow \text{Fe}^{3+}(\text{aq}) + \text{Mn}^{2+}(\text{aq})$
Step 1 Assign oxidation states to all atoms and identify the substances being oxidized and reduced.	$\begin{array}{ccccccc} \text{Al(s)} & + & \text{Cu}^{2+}(\text{aq}) & \longrightarrow & \text{Al}^{3+}(\text{aq}) & + & \text{Cu(s)} \\ 0 & & +2 & & +3 & & 0 \\ & \text{Oxidation} & & & \text{Reduction} & & \end{array}$ $\begin{array}{ccccccc} \text{Fe}^{2+}(\text{aq}) & + & \text{MnO}_4^{-}(\text{aq}) & \longrightarrow & \text{Fe}^{3+}(\text{aq}) & + & \text{Mn}^{2+}(\text{aq}) \\ +2 & & +7 \quad -2 & & +3 & & +2 \\ & \text{Oxidation} & & & \text{Reduction} & & \end{array}$	
Step 2 Separate the overall reaction into two half-reactions: one for oxidation and one for reduction.	Oxidation: $\text{Al(s)} \longrightarrow \text{Al}^{3+}(\text{aq})$ Reduction: $\text{Cu}^{2+}(\text{aq}) \longrightarrow \text{Cu(s)}$	Oxidation: $\text{Fe}^{2+}(\text{aq}) \longrightarrow \text{Fe}^{3+}(\text{aq})$ Reduction: $\text{MnO}_4^{-}(\text{aq}) \longrightarrow \text{Mn}^{2+}(\text{aq})$
Step 3 Balance each half-reaction with respect to mass in the following order: <ul style="list-style-type: none">Balance all elements other than H and O.Balance O by adding H_2O.Balance H by adding H^{+}.	All elements are balanced, so proceed to the next step.	All elements other than H and O are balanced, so proceed to balance H and O. $\text{Fe}^{2+}(\text{aq}) \longrightarrow \text{Fe}^{3+}(\text{aq})$ $\text{MnO}_4^{-}(\text{aq}) \longrightarrow \text{Mn}^{2+}(\text{aq}) + 4 \text{H}_2\text{O(l)}$ $8 \text{H}^{+}(\text{aq}) + \text{MnO}_4^{-}(\text{aq}) \longrightarrow \text{Mn}^{2+}(\text{aq}) + 4 \text{H}_2\text{O(l)}$
Step 4 Balance each half-reaction with respect to charge by adding electrons. (Make the sum of the charges on both sides of the equation equal by adding as many electrons as necessary.)	$\text{Al(s)} \longrightarrow \text{Al}^{3+}(\text{aq}) + 3 \text{e}^{-}$ $2 \text{e}^{-} + \text{Cu}^{2+}(\text{aq}) \longrightarrow \text{Cu(s)}$	$\text{Fe}^{2+}(\text{aq}) \longrightarrow \text{Fe}^{3+}(\text{aq}) + 1 \text{e}^{-}$ $5 \text{e}^{-} + 8 \text{H}^{+}(\text{aq}) + \text{MnO}_4^{-}(\text{aq}) \longrightarrow \text{Mn}^{2+}(\text{aq}) + 4 \text{H}_2\text{O(l)}$
Step 5 Make the number of electrons in both half-reactions equal by multiplying one or both half-reactions by a small whole number.	$2[\text{Al(s)} \longrightarrow \text{Al}^{3+}(\text{aq}) + 3 \text{e}^{-}]$ $2 \text{Al(s)} \longrightarrow 2 \text{Al}^{3+}(\text{aq}) + 6 \text{e}^{-}$ $3[2 \text{e}^{-} + \text{Cu}^{2+}(\text{aq}) \longrightarrow \text{Cu(s)}]$ $6 \text{e}^{-} + 3 \text{Cu}^{2+}(\text{aq}) \longrightarrow 3 \text{Cu(s)}$	$5[\text{Fe}^{2+}(\text{aq}) \longrightarrow \text{Fe}^{3+}(\text{aq}) + 1 \text{e}^{-}]$ $5 \text{Fe}^{2+}(\text{aq}) \longrightarrow 5 \text{Fe}^{3+}(\text{aq}) + 5 \text{e}^{-}$ $5 \text{e}^{-} + 8 \text{H}^{+}(\text{aq}) + \text{MnO}_4^{-}(\text{aq}) \longrightarrow \text{Mn}^{2+}(\text{aq}) + 4 \text{H}_2\text{O(l)}$
Step 6 Add the two half-reactions together, canceling electrons and other species as necessary.	$2 \text{Al(s)} \longrightarrow 2 \text{Al}^{3+}(\text{aq}) + 6 \text{e}^{-}$ $6 \text{e}^{-} + 3 \text{Cu}^{2+}(\text{aq}) \longrightarrow 3 \text{Cu(s)}$ <hr/> $2 \text{Al(s)} + 3 \text{Cu}^{2+}(\text{aq}) \longrightarrow 2 \text{Al}^{3+}(\text{aq}) + 3 \text{Cu(s)}$	$5 \text{Fe}^{2+}(\text{aq}) \longrightarrow 5 \text{Fe}^{3+}(\text{aq}) + 5 \text{e}^{-}$ $5 \text{e}^{-} + 8 \text{H}^{+}(\text{aq}) + \text{MnO}_4^{-}(\text{aq}) \longrightarrow \text{Mn}^{2+}(\text{aq}) + 4 \text{H}_2\text{O(l)}$ <hr/> $5 \text{Fe}^{2+}(\text{aq}) + 8 \text{H}^{+}(\text{aq}) + \text{MnO}_4^{-}(\text{aq}) \longrightarrow 5 \text{Fe}^{3+}(\text{aq}) + \text{Mn}^{2+}(\text{aq}) + 4 \text{H}_2\text{O(l)}$

—Continued on the next page

Continued from the previous page—

Step 7 Verify that the reaction is balanced with respect to both mass and charge.	<table><tr><th>Reactants</th><th>Products</th></tr><tr><td>2 Al</td><td>2 Al</td></tr><tr><td>3 Cu</td><td>3 Cu</td></tr><tr><td>6+ Charge</td><td>6+ Charge</td></tr></table>	Reactants	Products	2 Al	2 Al	3 Cu	3 Cu	6+ Charge	6+ Charge	<table><tr><th>Reactants</th><th>Products</th></tr><tr><td>5 Fe</td><td>5 Fe</td></tr><tr><td>8 H</td><td>8 H</td></tr><tr><td>1 Mn</td><td>1 Mn</td></tr><tr><td>4 O</td><td>4 O</td></tr><tr><td>17+ Charge</td><td>17+ Charge</td></tr></table>	Reactants	Products	5 Fe	5 Fe	8 H	8 H	1 Mn	1 Mn	4 O	4 O	17+ Charge	17+ Charge
	Reactants	Products																				
2 Al	2 Al																					
3 Cu	3 Cu																					
6+ Charge	6+ Charge																					
Reactants	Products																					
5 Fe	5 Fe																					
8 H	8 H																					
1 Mn	1 Mn																					
4 O	4 O																					
17+ Charge	17+ Charge																					
	FOR PRACTICE 19.1 Balance the redox reaction in acidic solution. $\text{H}^+(\text{aq}) + \text{Cr}(\text{s}) \longrightarrow \text{H}_2(\text{g}) + \text{Cr}^{2+}(\text{aq})$	FOR PRACTICE 19.2 Balance the redox reaction in acidic solution. $\text{Cu}(\text{s}) + \text{NO}_3^-(\text{aq}) \longrightarrow \text{Cu}^{2+}(\text{aq}) + \text{NO}_2(\text{g})$																				

When a redox reaction occurs in basic solution, we balance the reaction in a similar manner, except that we add an extra step to neutralize any H^+ with OH^- . The H^+ and the OH^- combine to form H_2O as demonstrated in Example 19.3.

EXAMPLE 19.3

Interactive
Worked Example
Video 19.3

PEARSON
eText
2.0

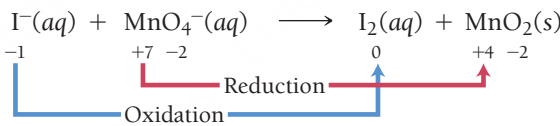
Balancing Redox Reactions Occurring in Basic Solution

Balance the equation occurring in basic solution.



SOLUTION

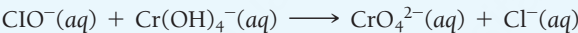
To balance redox reactions occurring in basic solution, follow the half-reaction method outlined in Examples 19.1 and 19.2, but add an extra step to neutralize the acid with OH^- as shown in Step 3 of this example.

1. Assign oxidation states.	
2. Separate the overall reaction into two half-reactions.	Oxidation: $\text{I}^-(\text{aq}) \longrightarrow \text{I}_2(\text{aq})$ Reduction: $\text{MnO}_4^-(\text{aq}) \longrightarrow \text{MnO}_2(\text{s})$
3. Balance each half-reaction with respect to mass: <ul style="list-style-type: none">Balance all elements other than H and O.Balance O by adding H_2O.Balance H by adding H^+.Neutralize H^+ by adding enough OH^- to neutralize each H^+. Add the same number of OH^- ions to each side of the equation.	$\begin{cases} 2 \text{I}^-(\text{aq}) \longrightarrow \text{I}_2(\text{aq}) \\ \text{MnO}_4^-(\text{aq}) \longrightarrow \text{MnO}_2(\text{s}) \end{cases}$ $\begin{cases} 2 \text{I}^-(\text{aq}) \longrightarrow \text{I}_2(\text{aq}) \\ \text{MnO}_4^-(\text{aq}) \longrightarrow \text{MnO}_2(\text{s}) + 2 \text{H}_2\text{O}(\text{l}) \end{cases}$ $\begin{cases} 2 \text{I}^-(\text{aq}) \longrightarrow \text{I}_2(\text{aq}) \\ 4 \text{H}^+(\text{aq}) + \text{MnO}_4^-(\text{aq}) \longrightarrow \text{MnO}_2(\text{s}) + 2 \text{H}_2\text{O}(\text{l}) \end{cases}$ $\begin{cases} 2 \text{I}^-(\text{aq}) \longrightarrow \text{I}_2(\text{aq}) \\ 4 \text{H}^+(\text{aq}) + 4 \text{OH}^-(\text{aq}) + \text{MnO}_4^-(\text{aq}) \longrightarrow \text{MnO}_2(\text{s}) + 2 \text{H}_2\text{O}(\text{l}) + 4 \text{OH}^-(\text{aq}) \end{cases}$ <p style="text-align: center;">$\underbrace{\hspace{10em}}_{4 \text{H}_2\text{O}(\text{l})}$</p>

4. Balance each half-reaction with respect to charge.	$2 \text{I}^{-}(\text{aq}) \longrightarrow \text{I}_2(\text{aq}) + 2 \text{e}^{-}$ $4 \text{H}_2\text{O}(\text{l}) + \text{MnO}_4^{-}(\text{aq}) + 3 \text{e}^{-} \longrightarrow \text{MnO}_2(\text{s}) + 2 \text{H}_2\text{O}(\text{l}) + 4 \text{OH}^{-}(\text{aq})$												
5. Make the number of electrons in both half-reactions equal.	$3 [2 \text{I}^{-}(\text{aq}) \longrightarrow \text{I}_2(\text{aq}) + 2 \text{e}^{-}]$ $6 \text{I}^{-}(\text{aq}) \longrightarrow 3 \text{I}_2(\text{aq}) + 6 \text{e}^{-}$ $2 [4 \text{H}_2\text{O}(\text{l}) + \text{MnO}_4^{-}(\text{aq}) + 3 \text{e}^{-} \longrightarrow \text{MnO}_2(\text{s}) + 2 \text{H}_2\text{O}(\text{l}) + 4 \text{OH}^{-}(\text{aq})]$ $8 \text{H}_2\text{O}(\text{l}) + 2 \text{MnO}_4^{-}(\text{aq}) + 6 \text{e}^{-} \longrightarrow 2 \text{MnO}_2(\text{s}) + 4 \text{H}_2\text{O}(\text{l}) + 8 \text{OH}^{-}(\text{aq})$												
6. Add the half-reactions together.	$6 \text{I}^{-}(\text{aq}) \longrightarrow 3 \text{I}_2(\text{aq}) + \cancel{6 \text{e}^{-}}$ $\cancel{4} 8 \text{H}_2\text{O}(\text{l}) + 2 \text{MnO}_4^{-}(\text{aq}) + \cancel{6 \text{e}^{-}} \longrightarrow 2 \text{MnO}_2(\text{s}) + \cancel{4} 4 \text{H}_2\text{O}(\text{l}) + 8 \text{OH}^{-}(\text{aq})$ $6 \text{I}^{-}(\text{aq}) + 4 \text{H}_2\text{O}(\text{l}) + 2 \text{MnO}_4^{-}(\text{aq}) \longrightarrow 3 \text{I}_2(\text{aq}) + 2 \text{MnO}_2(\text{s}) + 8 \text{OH}^{-}(\text{aq})$												
7. Verify that the reaction is balanced.	<table><thead><tr><th>Reactants</th><th>Products</th></tr></thead><tbody><tr><td>6 I</td><td>6 I</td></tr><tr><td>8 H</td><td>8 H</td></tr><tr><td>2 Mn</td><td>2 Mn</td></tr><tr><td>12 O</td><td>12 O</td></tr><tr><td>8- Charge</td><td>8- Charge</td></tr></tbody></table>	Reactants	Products	6 I	6 I	8 H	8 H	2 Mn	2 Mn	12 O	12 O	8- Charge	8- Charge
Reactants	Products												
6 I	6 I												
8 H	8 H												
2 Mn	2 Mn												
12 O	12 O												
8- Charge	8- Charge												

FOR PRACTICE 19.3

Balance the following redox reaction occurring in basic solution.



19.3 Voltaic (or Galvanic) Cells: Generating Electricity from Spontaneous Chemical Reactions

Electrical current is the flow of electric charge. Electrons flowing through a wire or ions flowing through a solution both constitute electrical current. Because redox reactions involve the transfer of electrons from one substance to another, they have the potential to generate electrical current as we discussed in Section 19.1. For example, consider the spontaneous redox reaction:



When Zn metal is placed in a Cu²⁺ solution, the greater tendency of zinc to lose electrons results in Zn being oxidized and Cu²⁺ being reduced. Electrons are transferred directly from the Zn to the Cu²⁺ (**Figure 19.1** ► on the next page). Although the actual process is more complicated, we can imagine that—on the atomic scale—a zinc atom within the zinc metal transfers two electrons to a copper ion in solution. The zinc atom then becomes a zinc ion dissolved in the solution. The copper(II) ion accepts the two electrons and is deposited on the zinc as solid copper.

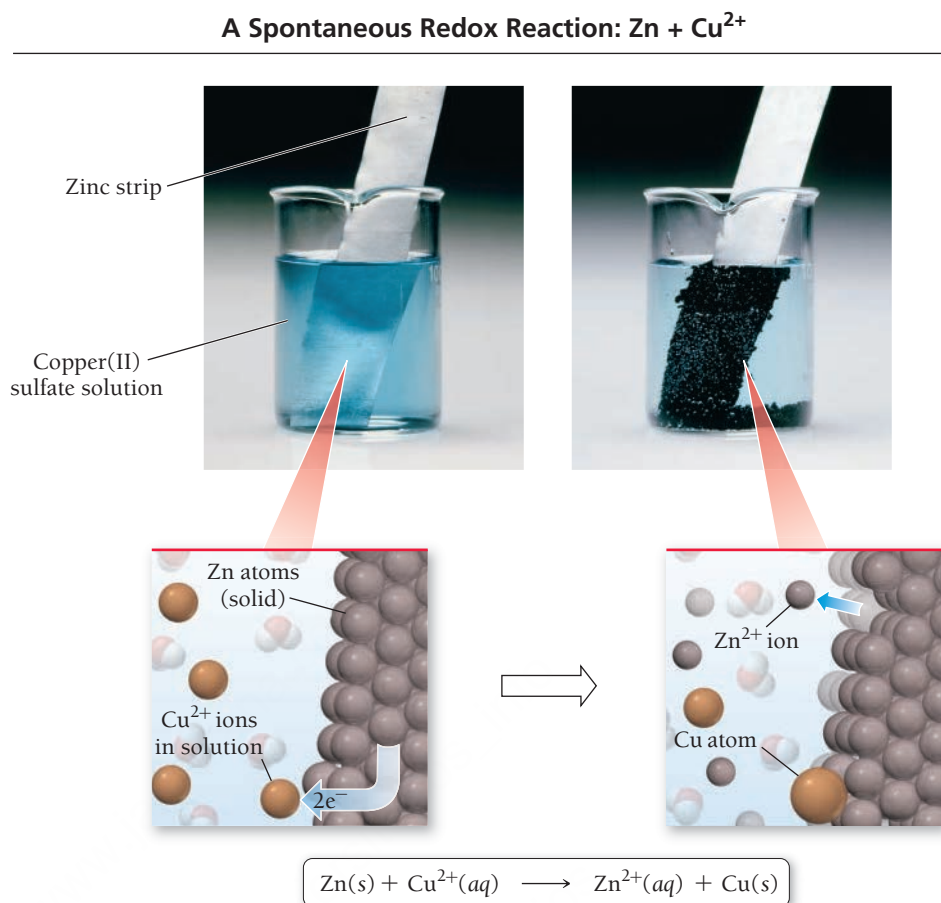
We can separate the zinc atoms and copper(II) ions and force the electron transfer to occur another way—not directly from the zinc atom to the copper(II) ion, but through a wire connecting the two half-reactions. The flowing electrons constitute an electrical current and can be used to do electrical work.

The Voltaic Cell

The generation of electricity through redox reactions is normally carried out in a device called an **electrochemical cell**. A **voltaic (or galvanic) cell** is an electrochemical cell that *produces* electrical current from a *spontaneous* chemical reaction. A second type of electrochemical cell, called an **electrolytic cell**, *consumes* electrical current to drive a *nonspontaneous* chemical reaction. We discuss voltaic cells in this section and electrolytic cells in Section 19.8.

► **FIGURE 19.1 A Spontaneous Oxidation–Reduction Reaction**

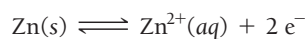
When zinc is immersed in a solution containing copper(II) ions, the zinc atoms transfer electrons to the copper(II) ions. The zinc atoms are oxidized and dissolve in the solution. The copper(II) ions are reduced and are deposited on the electrode.



The *continual* flow of electrical current in a voltaic cell requires a pathway by which counterions can flow to neutralize charge buildup; we discuss this later in the chapter.

The idea that one electrode in a voltaic cell becomes more negatively charged relative to the other electrode due to differences in ionization tendencies is central to understanding how a voltaic cell works.

In the voltaic cell in **Figure 19.2** ►, a solid strip of zinc is placed in a $\text{Zn}(\text{NO}_3)_2$ solution to form a **half-cell**. A solid strip of copper placed in a $\text{Cu}(\text{NO}_3)_2$ solution forms a second half-cell. The strips act as **electrodes**, conductive surfaces through which electrons can enter or leave the half-cells. Each metal strip reaches equilibrium with its ions in solution according to these half-reactions:



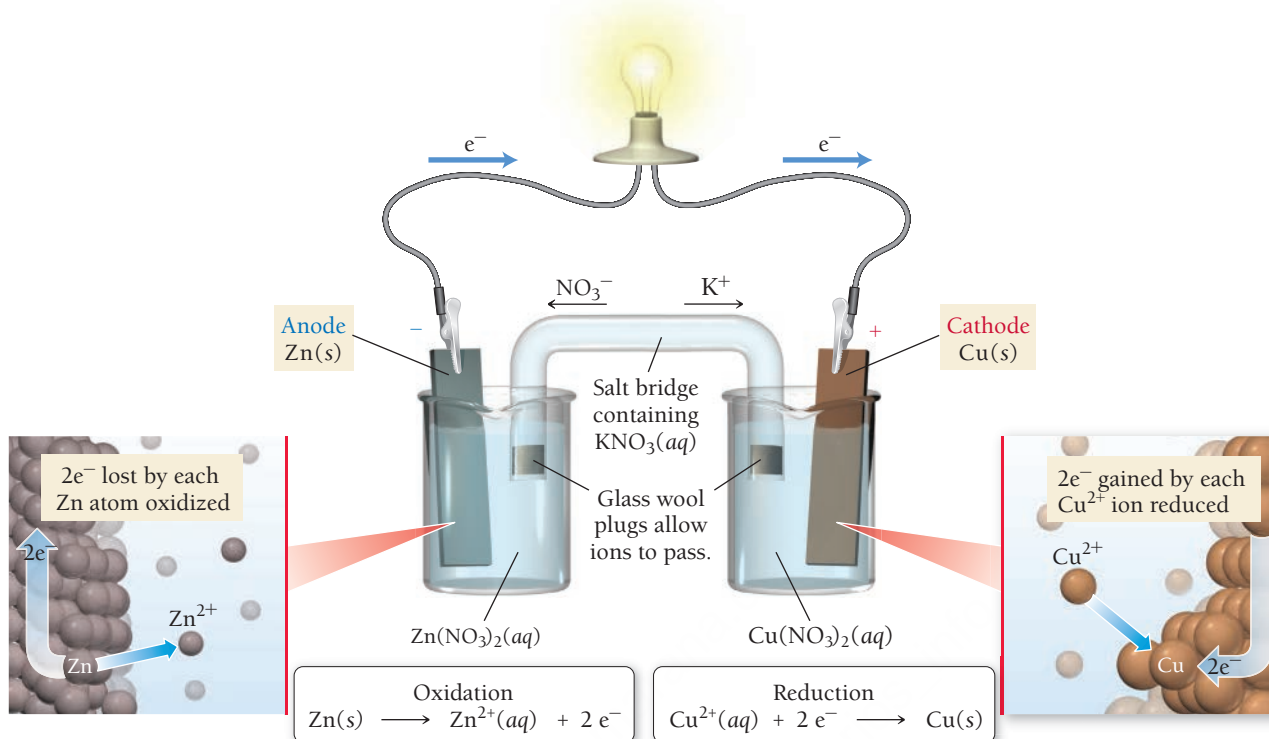
However, the position of these equilibria—which depends on the potential energy of the electrons in each metal—is not the same for both metals. The electrons in zinc have a higher potential energy, and therefore zinc has a greater tendency to ionize than copper, so that the zinc half-reaction lies further to the right. As a result, the zinc electrode becomes negatively charged relative to the copper electrode.

If the two half-cells are connected by a wire running from the zinc—through a light bulb or other electrical device—to the copper, electrons spontaneously flow from the zinc electrode (where they have higher potential energy) to the copper electrode (where they have lower potential energy). As the electrons flow away from the zinc electrode, the Zn/Zn^{2+} equilibrium shifts to the right (according to Le Châtelier's principle) and oxidation occurs. As electrons flow to the copper electrode, the Cu/Cu^{2+} equilibrium shifts to the left, and reduction occurs. The flowing electrons constitute an electrical current that lights the bulb.

Electrical Current and Potential Difference

We can understand electrical current and why it flows by analogy with water current in a stream (**Figure 19.3** ►). The *rate of electrons flowing* through a wire is analogous to the *rate of water moving*

A Voltaic Cell



▲ **FIGURE 19.2 A Voltaic Cell** The tendency of zinc to transfer electrons to copper results in a flow of electrons through the wire that lights the bulb. The movement of electrons from the zinc anode to the copper cathode creates a positive charge buildup at the zinc half-cell and a negative charge buildup at the copper half-cell. The flow of ions within the salt bridge (which we describe later in this section) neutralizes this charge buildup, allowing the reaction to continue.

through a stream. We measure electrical current in units of **amperes (A)** also called *amps*. One ampere represents the flow of one coulomb (a measure of electrical charge) per second.

$$1 \text{ A} = 1 \text{ C/s}$$

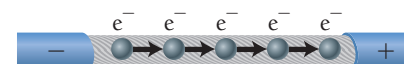
Because an electron has a charge of $1.602 \times 10^{-19} \text{ C}$, 1 A corresponds to the flow of 6.242×10^{18} electrons per second.

The *driving force* for electrical current is analogous to the driving force for water current. Water current is driven by a difference in gravitational potential energy. Streams flow downhill, from higher to lower potential energy. Electrical current is also driven by a difference in potential energy. Electrons flow from the electrode in which they have higher potential energy to the electrode in which they have lower potential energy. The difference in potential energy between the two electrodes is called **potential difference**. *Potential difference is a measure of the difference in potential energy (usually in joules) per unit of charge (coulombs).* The SI unit of potential difference is the **volt (V)**, which is equal to one joule per coulomb.

$$1 \text{ V} = 1 \text{ J/C}$$

In other words, a potential difference of one volt indicates that a charge of one coulomb experiences an energy difference of one joule between the two electrodes.

A large potential difference corresponds to a large difference in potential energy between the two electrodes and therefore a strong tendency for electron flow (analogous to a steeply descending streambed). Potential difference, because it gives rise to the force that results in the motion of electrons, is also referred to as **electromotive force (emf)**. In a voltaic cell, the potential difference between the two electrodes is the **cell potential (E_{cell})** or **cell emf**. The cell potential depends on the relative tendencies of the



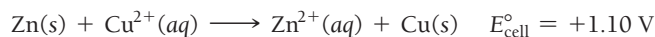
Water flowing in a stream is analogous to electrons flowing in a wire.

▲ **FIGURE 19.3 An Analogy for Electrical Current** Just as water flows downhill in response to a difference in gravitational potential energy, electrons flow through a conductor in response to an electrical potential difference, creating an electrical current.

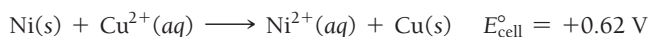
Standard states, indicated by the symbol $^\circ$, represent a very specific reaction mixture. For a reaction mixture with reactants and products in their standard states, $Q = 1$.

reactants to undergo oxidation and reduction. Combining the oxidation of a substance with a strong tendency to undergo oxidation and the reduction of a substance with a strong tendency to undergo reduction produces a large difference in charge between the two electrodes and therefore a high positive cell potential.

In general, the cell potential also depends on the concentrations of the reactants and products in the cell and the temperature (which we assume to be 25°C unless otherwise noted). When the reactants and products are in their standard states (1 M concentration for substances in solution and 1 atm pressure for gaseous substances), the cell potential is called the **standard cell potential** (E°_{cell}) or **standard emf**. For example, the standard cell potential in the zinc and copper cell described previously is 1.10 volts:



If the zinc is replaced with nickel (which has a lower tendency to be oxidized) the standard cell potential is lower:



The cell potential is a measure of the overall tendency of the redox reaction to occur spontaneously—the lower the cell potential, the lower the tendency to occur. A negative cell potential indicates that the forward reaction is not spontaneous.

Anode, Cathode, and Salt Bridge

Note that the anode and cathode need not actually be negatively and positively charged, respectively. The anode is the electrode with the relatively *more* negative (or less positive) charge.

In all electrochemical cells, the electrode where oxidation occurs is the **anode**, and the electrode where reduction occurs is the **cathode**. In a voltaic cell, the anode is the more negatively charged electrode, and we label it with a negative (−) sign. The cathode of a voltaic cell is the more positively charged electrode, and we label it with a (+) sign. Electrons flow from the anode to the cathode (from negative to positive) through the wires connecting the electrodes.

As electrons flow out of the anode, positive ions (Zn^{2+} in the preceding example) form in the oxidation half-cell, resulting in a buildup of *positive charge* in the *solution*. As electrons flow into the cathode, positive ions (Cu^{2+} in the preceding example) are reduced at the reduction half-cell, resulting in a buildup of *negative charge* in the *solution*.

If the movement of electrons from anode to cathode were the only flow of charge, the buildup of the opposite charge in the solution would stop electron flow almost immediately. The cell needs a pathway by which counterions can flow between the half-cells without the solutions in the half-cells totally mixing. One such pathway is a **salt bridge**, an inverted, U-shaped tube that contains a strong electrolyte such as KNO_3 and connects the two half-cells (see Figure 19.2). The electrolyte is usually suspended in a gel and held within the tube by permeable stoppers. The salt bridge allows a flow of ions that neutralizes the charge buildup in the solution. *The negative ions within the salt bridge flow to neutralize the accumulation of positive charge at the anode, and the positive ions flow to neutralize the accumulation of negative charge at the cathode.* In other words, the salt bridge completes the circuit, allowing electrical current to flow.



19.1 Cc

Conceptual Connection

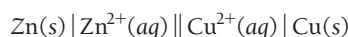
Voltaic Cells

In a voltaic cell, in which direction do electrons flow?

- (a) from higher potential energy to lower potential energy
- (b) from the cathode to the anode
- (c) from lower potential energy to higher potential energy

Electrochemical Cell Notation

We represent electrochemical cells with a compact notation called a *cell diagram* or *line notation*. For example, we can represent the electrochemical cell in which Zn is oxidized to Zn^{2+} and Cu^{2+} is reduced to Cu as follows:



In this representation,

- we write the oxidation half-reaction on the left and the reduction on the right. A double vertical line, indicating the salt bridge, separates the two half-reactions.
- substances in different phases are separated by a single vertical line, which represents the boundary between the phases.
- for some redox reactions, the reactants and products of one or both of the half-reactions may be in the same phase. In these cases (which we explain further next), we separate the reactants and products from each other with a comma in the line diagram. Such cells use an inert electrode, such as platinum (Pt) or graphite, as the anode or cathode (or both).

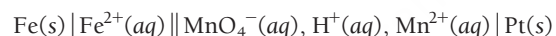
Consider the redox reaction in which Fe(s) is oxidized and $\text{MnO}_4^-(\text{aq})$ is reduced:



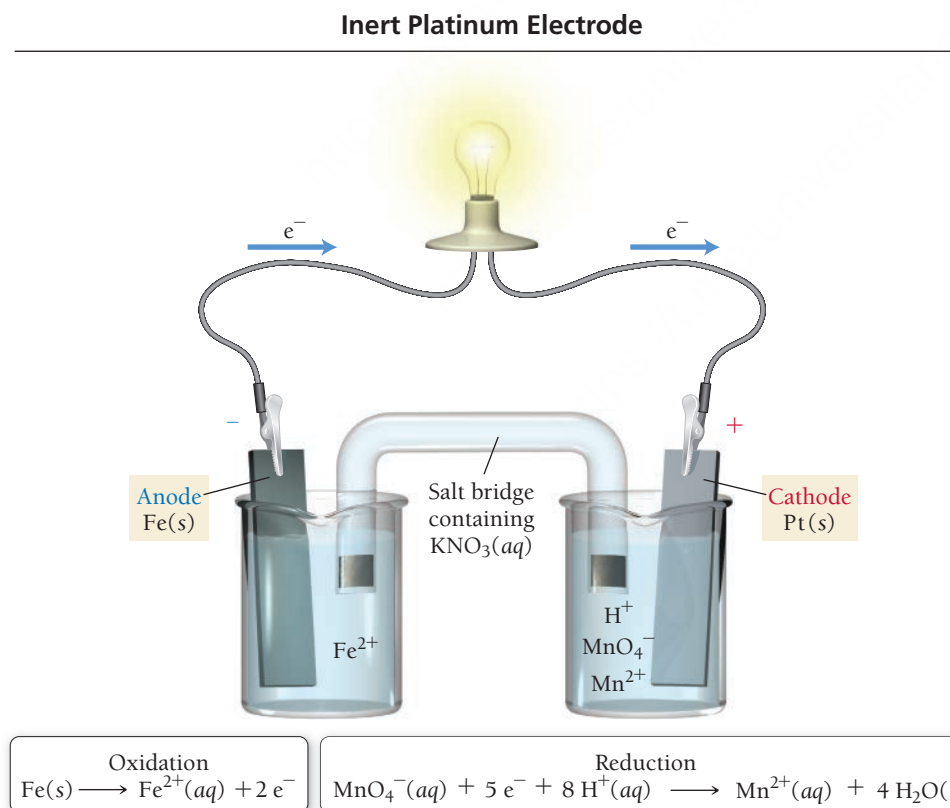
The half-reactions for this overall reaction are:



Notice that in the reduction half-reaction the principal species are all in the aqueous phase. In this case, the electron transfer needs an electrode on which to occur. An inert platinum electrode is employed, and the electron transfer takes place at its surface. Using line notation, we represent the electrochemical cell corresponding to the above reaction as:



The Pt(s) on the far right indicates that an inert platinum electrode acts as the cathode in this reaction, as depicted in **Figure 19.4**.



▲ FIGURE 19.4 Inert Platinum Electrode When the participants in a half-reaction are all in the aqueous phase, a conductive surface is needed for electron transfer to take place. In such cases, an inert electrode of graphite or platinum is often used. In this electrochemical cell, an iron strip acts as the anode and a platinum strip acts as the cathode. Iron is oxidized at the anode, and MnO_4^- is reduced at the cathode.



19.4 Standard Electrode Potentials

As we have just seen, the standard cell potential (E°_{cell}) for an electrochemical cell depends on the specific half-reactions occurring in the half-cells and is a measure of the potential energy difference (per unit charge) between the two electrodes. We can think of the electrode in each half-cell as having its own individual potential, called the **standard electrode potential**. The overall standard cell potential (E°_{cell}) is the difference between the two standard electrode potentials.

We can better understand this idea with an analogy. Consider two water tanks with different water levels connected by a common pipe, as shown in **Figure 19.5** ◀. The water in each tank has its own level and corresponding potential energy. When the tanks are connected, water flows from the tank with the higher water level (higher potential energy) to the tank with a lower water level (lower potential energy). Similarly, each half-cell in an electrochemical cell has its own charge and corresponding electrode potential. *When the cells are connected, electrons flow from the electrode with greater potential energy (more negatively charged) to the electrode with less potential energy (more positively charged).*

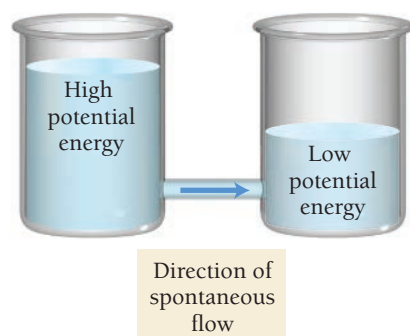
One limitation to this analogy is that, unlike the water level in a tank, we cannot measure the electrode potential in a half-cell directly—we can only measure the overall potential that occurs when two half-cells are combined in a whole cell. However, we can arbitrarily assign a potential of zero to the electrode in a *particular* type of half-cell and then measure all other electrode potentials relative to that zero.

The half-cell electrode that is normally chosen to have a potential of zero is the **standard hydrogen electrode (SHE)**. This half-cell consists of an inert platinum electrode immersed in 1 M HCl with hydrogen gas at 1 atm bubbling through the solution, as shown in **Figure 19.6** ▼. When the standard hydrogen electrode acts as the cathode, the following half-reaction occurs:



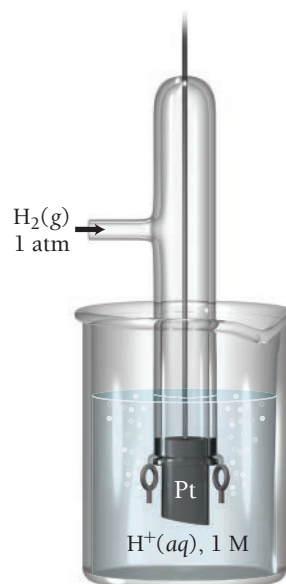
If we connect the standard hydrogen electrode to an electrode in another half-cell of interest, we can measure the potential difference (or voltage) between the two electrodes. Since we assigned the standard hydrogen electrode zero voltage, we can determine the electrode potential of the other half-cell.

Consider the electrochemical cell shown in **Figure 19.7** ►. In this electrochemical cell, Zn is oxidized to Zn^{2+} and H^+ is reduced to H_2 under standard conditions (all solutions are 1 M in concentration and all gases are 1 atm in pressure) and at 25 °C. Electrons travel from the anode (where oxidation



▲ **FIGURE 19.5** An Analogy for Electrode Potential

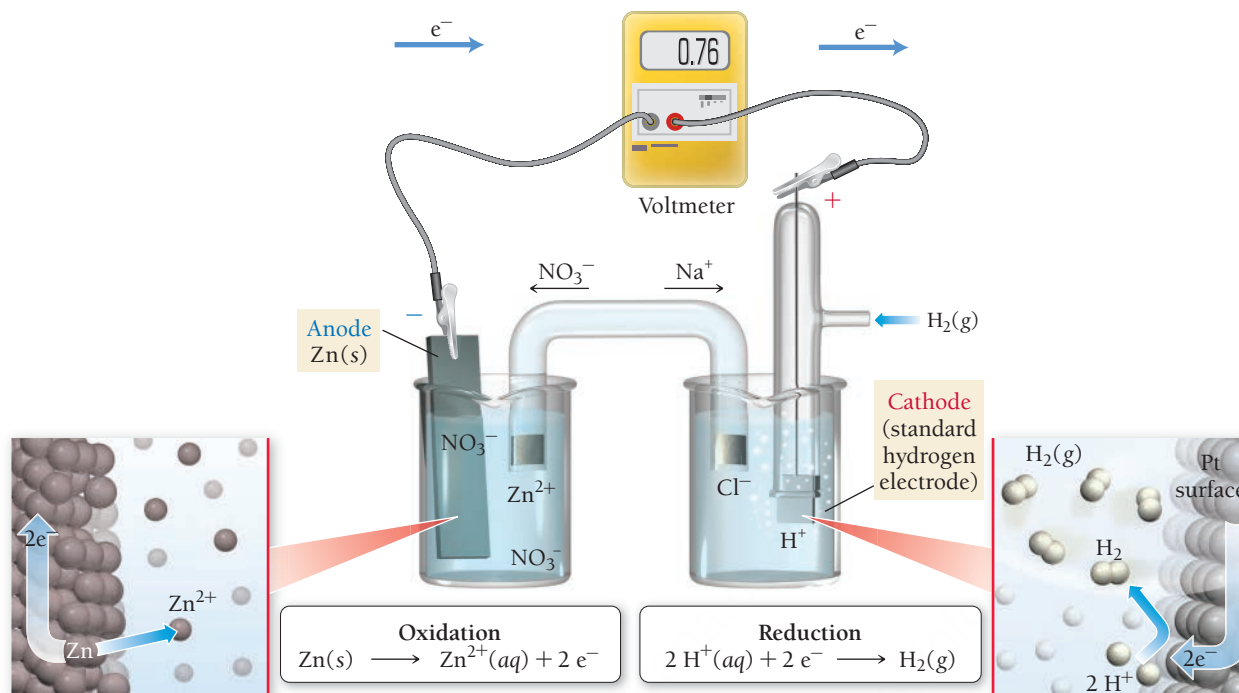
Standard Hydrogen Electrode (SHE)



The standard hydrogen electrode (SHE) is arbitrarily assigned an electrode potential of zero.

► **FIGURE 19.6** The Standard Hydrogen Electrode All other electrode potentials are then measured relative to the SHE.

Measuring Half-Cell Potential with the SHE

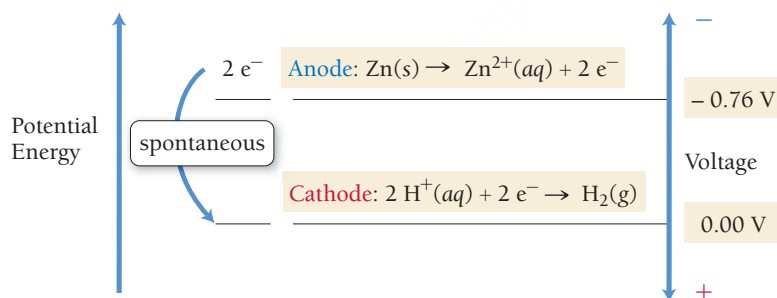


▲ FIGURE 19.7 Measuring Electrode Potential Because the electrode potential of the SHE is zero, the electrode potential for the oxidation of Zn is equal to the cell potential.

occurs) to the cathode (where reduction occurs), so we define E_{cell}° as the difference in voltage between the cathode (final state) and the anode (initial state).

$$\begin{aligned} E_{\text{cell}}^\circ &= E_{\text{final}}^\circ - E_{\text{initial}}^\circ \\ &= E_{\text{cathode}}^\circ - E_{\text{anode}}^\circ \end{aligned}$$

The measured cell potential for this cell is +0.76 V. The anode (in this case, Zn/Zn^{2+}) is at a more negative voltage (higher potential energy) than the cathode (in this case, the SHE). Therefore, electrons spontaneously flow from the anode to the cathode. We can diagram the potential energy and the voltage as follows:



Referring back to our water tank analogy, the zinc half-cell is like the water tank with the higher water level. Electrons therefore flow from the zinc electrode to the standard hydrogen electrode.

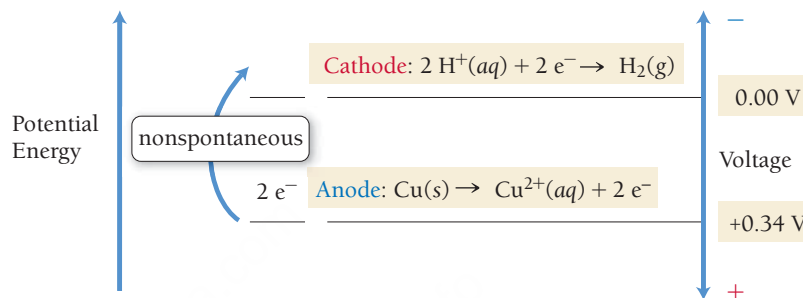
Because we assigned the SHE a potential of zero (0.00 V), we can determine the electrode potential for the Zn/Zn^{2+} half-cell (the anode) from the measured cell potential (E_{cell}°).

$$\begin{aligned} E_{\text{cell}}^\circ &= E_{\text{cathode}}^\circ - E_{\text{anode}}^\circ \\ 0.76\text{ V} &= 0.00\text{ V} - E_{\text{anode}}^\circ \\ E_{\text{anode}}^\circ &= -0.76\text{ V} \end{aligned}$$

The potential for the Zn/Zn^{2+} electrode is *negative*. The negative potential indicates that an electron at the Zn/Zn^{2+} electrode has greater potential energy than it does at the SHE. *Remember that the more negative the electrode potential is, the greater the potential energy of an electron at that electrode.*

What would happen if we connected an electrode in which the electron has *more positive* potential (than the standard hydrogen electrode) to the standard hydrogen electrode? That electrode would then have a more *positive* voltage (lower potential energy for an electron).

For example, suppose we connect the standard hydrogen electrode to a Cu electrode immersed in a 1 M Cu^{2+} solution. The measured cell potential for this cell is -0.34 V. The anode (Cu/Cu^{2+}) is at a more positive voltage (lower potential energy) than the cathode (the SHE). Therefore, electrons do *not* spontaneously flow from the anode to the cathode. We diagram the potential energy and the voltage of this cell as follows:



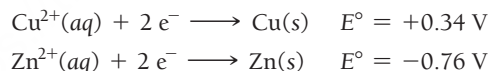
The copper half-cell is like the water tank with the lower water level, and electrons *do not* spontaneously flow from the copper electrode to the standard hydrogen electrode.

We can determine the electrode potential for the Cu/Cu^{2+} half-cell (the anode) from the measured cell potential as we did for the Zn/Zn^{2+} half-cell.

$$\begin{aligned} E_{\text{cell}}^{\circ} &= E_{\text{cathode}}^{\circ} - E_{\text{anode}}^{\circ} \\ -0.34 \text{ V} &= 0.00 \text{ V} - E_{\text{anode}}^{\circ} \\ E_{\text{anode}}^{\circ} &= +0.34 \text{ V} \end{aligned}$$

The potential for the Cu/Cu^{2+} electrode is *positive*. The positive potential indicates that an electron at the Cu/Cu^{2+} electrode has *lower* potential energy than it does at the SHE. The more positive the electrode potential, the lower the potential energy of an electron at that electrode.

By convention, standard electrode potentials are written for *reduction* half-reactions. We write the standard electrode potentials for the two half-reactions just discussed as:



We can see that the Cu/Cu^{2+} electrode is positive relative to the SHE (and will therefore tend to draw electrons away from the SHE) and that the Zn/Zn^{2+} electrode is negative relative to the SHE (and will therefore tend to repel electrons toward the SHE). The standard electrode potentials for a number of common half-reactions are listed in Table 19.1.

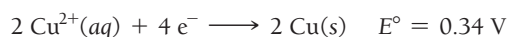
Summarizing Standard Electrode Potentials:

- The electrode potential of the standard hydrogen electrode (SHE) is exactly zero.
- The electrode in any half-cell with a greater tendency to undergo reduction is positively charged relative to the SHE and therefore has a positive E° .
- The electrode in any half-cell with a lesser tendency to undergo reduction (or greater tendency to undergo oxidation) is negatively charged relative to the SHE and therefore has a negative E° .
- The cell potential of any electrochemical cell (E_{cell}°) is the difference between the electrode potentials of the cathode and the anode ($E_{\text{cell}}^{\circ} = E_{\text{cat}}^{\circ} - E_{\text{an}}^{\circ}$).
- E_{cell}° is positive for spontaneous reactions and negative for nonspontaneous reactions.

TABLE 19.1 Standard Electrode Potentials at 25 °C

Reduction Half-Reaction			$E^\circ(\text{V})$	
Stronger oxidizing agent 	$\text{F}_2(\text{g}) + 2 \text{e}^-$	$\longrightarrow 2 \text{F}^-(\text{aq})$	2.87	Weaker reducing agent 
	$\text{H}_2\text{O}_2(\text{aq}) + 2 \text{H}^+(\text{aq}) + 2 \text{e}^-$	$\longrightarrow 2 \text{H}_2\text{O}(\text{l})$	1.78	
	$\text{PbO}_2(\text{s}) + 4 \text{H}^+(\text{aq}) + \text{SO}_4^{2-}(\text{aq}) + 2 \text{e}^-$	$\longrightarrow \text{PbSO}_4(\text{s}) + 2 \text{H}_2\text{O}(\text{l})$	1.69	
	$\text{MnO}_4^-(\text{aq}) + 4 \text{H}^+(\text{aq}) + 3 \text{e}^-$	$\longrightarrow \text{MnO}_2(\text{s}) + 2 \text{H}_2\text{O}(\text{l})$	1.68	
	$\text{MnO}_4^-(\text{aq}) + 8 \text{H}^+(\text{aq}) + 5 \text{e}^-$	$\longrightarrow \text{Mn}^{2+}(\text{aq}) + 4 \text{H}_2\text{O}(\text{l})$	1.51	
	$\text{Au}^{3+}(\text{aq}) + 3 \text{e}^-$	$\longrightarrow \text{Au}(\text{s})$	1.50	
	$\text{PbO}_2(\text{s}) + 4 \text{H}^+(\text{aq}) + 2 \text{e}^-$	$\longrightarrow \text{Pb}^{2+}(\text{aq}) + 2 \text{H}_2\text{O}(\text{l})$	1.46	
	$\text{Cl}_2(\text{g}) + 2 \text{e}^-$	$\longrightarrow 2 \text{Cl}^-(\text{aq})$	1.36	
	$\text{Cr}_2\text{O}_7^{2-}(\text{aq}) + 14 \text{H}^+(\text{aq}) + 6 \text{e}^-$	$\longrightarrow 2 \text{Cr}^{3+}(\text{aq}) + 7 \text{H}_2\text{O}(\text{l})$	1.33	
	$\text{O}_2(\text{g}) + 4 \text{H}^+(\text{aq}) + 4 \text{e}^-$	$\longrightarrow 2 \text{H}_2\text{O}(\text{l})$	1.23	
	$\text{MnO}_2(\text{s}) + 4 \text{H}^+(\text{aq}) + 2 \text{e}^-$	$\longrightarrow \text{Mn}^{2+}(\text{aq}) + 2 \text{H}_2\text{O}(\text{l})$	1.21	
	$\text{IO}_3^-(\text{aq}) + 6 \text{H}^+(\text{aq}) + 5 \text{e}^-$	$\longrightarrow \frac{1}{2} \text{I}_2(\text{aq}) + 3 \text{H}_2\text{O}(\text{l})$	1.20	
	$\text{Br}_2(\text{l}) + 2 \text{e}^-$	$\longrightarrow 2 \text{Br}^-(\text{aq})$	1.09	
	$\text{VO}_2^+(\text{aq}) + 2 \text{H}^+(\text{aq}) + \text{e}^-$	$\longrightarrow \text{VO}^{2+}(\text{aq}) + \text{H}_2\text{O}(\text{l})$	1.00	
	$\text{NO}_3^-(\text{aq}) + 4 \text{H}^+(\text{aq}) + 3 \text{e}^-$	$\longrightarrow \text{NO}(\text{g}) + 2 \text{H}_2\text{O}(\text{l})$	0.96	
	$\text{ClO}_2(\text{g}) + \text{e}^-$	$\longrightarrow \text{ClO}_2^-(\text{aq})$	0.95	
	$\text{Ag}^+(\text{aq}) + \text{e}^-$	$\longrightarrow \text{Ag}(\text{s})$	0.80	
	$\text{Fe}^{3+}(\text{aq}) + \text{e}^-$	$\longrightarrow \text{Fe}^{2+}(\text{aq})$	0.77	
	$\text{O}_2(\text{g}) + 2 \text{H}^+(\text{aq}) + 2 \text{e}^-$	$\longrightarrow \text{H}_2\text{O}_2(\text{aq})$	0.70	
	$\text{MnO}_4^-(\text{aq}) + \text{e}^-$	$\longrightarrow \text{MnO}_4^{2-}(\text{aq})$	0.56	
	$\text{I}_2(\text{s}) + 2 \text{e}^-$	$\longrightarrow 2 \text{I}^-(\text{aq})$	0.54	
	$\text{Cu}^+(\text{aq}) + \text{e}^-$	$\longrightarrow \text{Cu}(\text{s})$	0.52	
	$\text{O}_2(\text{g}) + 2 \text{H}_2\text{O}(\text{l}) + 4 \text{e}^-$	$\longrightarrow 4 \text{OH}^-(\text{aq})$	0.40	
	$\text{Cu}^{2+}(\text{aq}) + 2 \text{e}^-$	$\longrightarrow \text{Cu}(\text{s})$	0.34	
	$\text{SO}_4^{2-}(\text{aq}) + 4 \text{H}^+(\text{aq}) + 2 \text{e}^-$	$\longrightarrow \text{H}_2\text{SO}_3(\text{aq}) + \text{H}_2\text{O}(\text{l})$	0.20	
	$\text{Cu}^{2+}(\text{aq}) + \text{e}^-$	$\longrightarrow \text{Cu}^+(\text{aq})$	0.16	
	$\text{Sn}^{4+}(\text{aq}) + 2 \text{e}^-$	$\longrightarrow \text{Sn}^{2+}(\text{aq})$	0.15	
	$2 \text{H}^+(\text{aq}) + 2 \text{e}^-$	$\longrightarrow \text{H}_2(\text{g})$	0	
	$\text{Fe}^{3+}(\text{aq}) + 3 \text{e}^-$	$\longrightarrow \text{Fe}(\text{s})$	-0.036	
	$\text{Pb}^{2+}(\text{aq}) + 2 \text{e}^-$	$\longrightarrow \text{Pb}(\text{s})$	-0.13	
	$\text{Sn}^{2+}(\text{aq}) + 2 \text{e}^-$	$\longrightarrow \text{Sn}(\text{s})$	-0.14	
	$\text{Ni}^{2+}(\text{aq}) + 2 \text{e}^-$	$\longrightarrow \text{Ni}(\text{s})$	-0.23	
	$\text{Cd}^{2+}(\text{aq}) + 2 \text{e}^-$	$\longrightarrow \text{Cd}(\text{s})$	-0.40	
	$\text{Fe}^{2+}(\text{aq}) + 2 \text{e}^-$	$\longrightarrow \text{Fe}(\text{s})$	-0.45	
	$\text{Cr}^{3+}(\text{aq}) + \text{e}^-$	$\longrightarrow \text{Cr}^{2+}(\text{aq})$	-0.50	
	$\text{Cr}^{3+}(\text{aq}) + 3 \text{e}^-$	$\longrightarrow \text{Cr}(\text{s})$	-0.73	
	$\text{Zn}^{2+}(\text{aq}) + 2 \text{e}^-$	$\longrightarrow \text{Zn}(\text{s})$	-0.76	
	$2 \text{H}_2\text{O}(\text{l}) + 2 \text{e}^-$	$\longrightarrow \text{H}_2(\text{g}) + 2 \text{OH}^-(\text{aq})$	-0.83	
	$\text{Mn}^{2+}(\text{aq}) + 2 \text{e}^-$	$\longrightarrow \text{Mn}(\text{s})$	-1.18	
	$\text{Al}^{3+}(\text{aq}) + 3 \text{e}^-$	$\longrightarrow \text{Al}(\text{s})$	-1.66	
	$\text{Mg}^{2+}(\text{aq}) + 2 \text{e}^-$	$\longrightarrow \text{Mg}(\text{s})$	-2.37	
	$\text{Na}^+(\text{aq}) + \text{e}^-$	$\longrightarrow \text{Na}(\text{s})$	-2.71	
	$\text{Ca}^{2+}(\text{aq}) + 2 \text{e}^-$	$\longrightarrow \text{Ca}(\text{s})$	-2.76	
	$\text{Ba}^{2+}(\text{aq}) + 2 \text{e}^-$	$\longrightarrow \text{Ba}(\text{s})$	-2.90	
	$\text{K}^+(\text{aq}) + \text{e}^-$	$\longrightarrow \text{K}(\text{s})$	-2.92	
	$\text{Li}^+(\text{aq}) + \text{e}^-$	$\longrightarrow \text{Li}(\text{s})$	-3.04	
Weaker oxidizing agent				Stronger reducing agent

Multiplying a half-reaction by some constant does *not* affect the value of E° for the half-reaction.



Example 19.4 illustrates how to calculate the standard potential of an electrochemical cell from the standard electrode potentials of the half-reactions.

EXAMPLE 19.4

Calculating Standard Potentials for Electrochemical Cells from Standard Electrode Potentials of the Half-Reactions

Interactive
Worked Example
Video 19.4

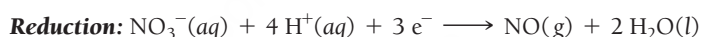

PEARSON
eText
2.0

Use tabulated standard electrode potentials to calculate the standard cell potential for this reaction occurring in an electrochemical cell at 25°C . (The equation is balanced.)



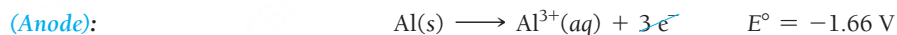
SOLUTION

Begin by separating the reaction into oxidation and reduction half-reactions. (In this case, you can readily see that $\text{Al}(\text{s})$ is oxidized. In cases where it is not so apparent, you may want to assign oxidation states to determine the correct half-reactions.)




Look up the standard electrode potentials for each half-reaction in Table 19.1. Add the half-cell reactions together to obtain the overall redox equation. Calculate the standard cell potential by subtracting the electrode potential of the anode from the electrode potential of the cathode.

Oxidation



Reduction



$$\begin{aligned} E^\circ_{\text{cell}} &= E^\circ_{\text{cat}} - E^\circ_{\text{an}} \\ &= 0.96 \text{ V} - (-1.66 \text{ V}) \\ &= 2.62 \text{ V} \end{aligned}$$

FOR PRACTICE 19.4

Use tabulated standard electrode potentials to calculate the standard cell potential for this reaction occurring in an electrochemical cell at 25°C . (The equation is balanced.)



19.2 Cc

Conceptual
Connection

Standard Electrode Potentials

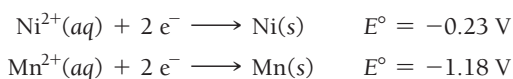
An electrode has a negative electrode potential. Which statement is correct regarding the potential energy of an electron at this electrode?

- An electron at this electrode has a lower potential energy than it has at a standard hydrogen electrode.
- An electron at this electrode has a higher potential energy than it has at a standard hydrogen electrode.
- An electron at this electrode has the same potential energy as it has at a standard hydrogen electrode.

Predicting the Spontaneous Direction of an Oxidation–Reduction Reaction

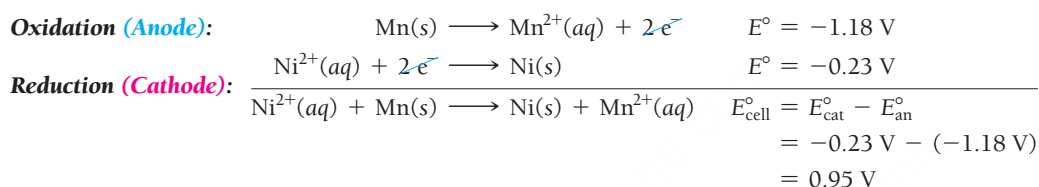
To determine the spontaneous direction of an oxidation–reduction reaction, we examine the electrode potentials of the two relevant half-reactions in Table 19.1. The half-reaction with the more *negative* electrode potential tends to lose electrons and therefore undergo oxidation. (Remember that negative charge repels electrons.) The half-reaction having the more *positive* electrode potential tends to gain electrons and therefore undergo reduction. (Remember that positive charge attracts electrons.)

Consider the two reduction half-reactions:



Because the manganese half-reaction has a more negative electrode potential, it repels electrons and proceeds in the reverse direction (oxidation). Because the nickel half-reaction has the more positive (or less negative) electrode potential, it attracts electrons and proceeds in the forward direction.

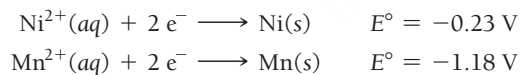
We can confirm this by calculating the standard electrode potential for manganese acting as the anode (oxidation) and nickel acting as the cathode (reduction).



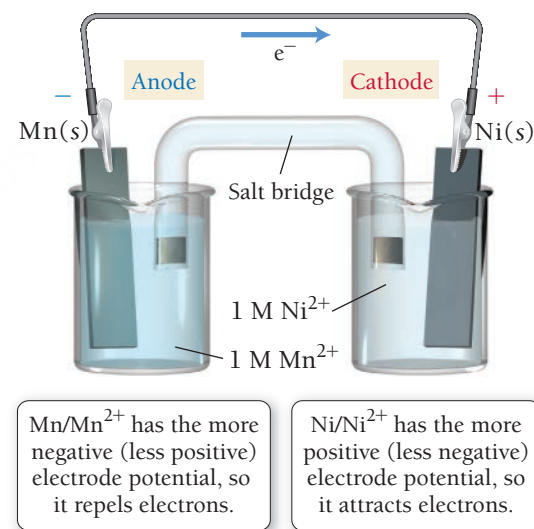
The overall cell potential is positive, indicating a spontaneous reaction. Consider the electrochemical cell corresponding to this spontaneous redox reaction in **Figure 19.8**. We draw the manganese half-cell on the left as the anode and the nickel half-cell on the right as the cathode. Electrons flow from the anode to the cathode.

Another way to predict the spontaneity of a redox reaction is to note the relative positions of the two half-reactions in Table 19.1. The table lists half-reactions in order of *decreasing* electrode potential, so the half-reactions near the top of the table—those having large *positive* electrode potentials—attract electrons and therefore tend to occur in the forward direction. Half-reactions near the bottom of the table—those having large *negative* electrode potentials—repel electrons and therefore tend to occur in the reverse direction. In other words, as we move down Table 19.1, the half-reactions become less likely to occur in the forward direction and more likely to occur in the reverse direction. As a result, *any reduction half-reaction listed is spontaneous when paired with the reverse of a half-reaction that appears below it in Table 19.1.*

For example, if we return to our two previous half-reactions involving manganese and nickel, we see that the manganese half-reaction is listed below the nickel half-reaction in Table 19.1.



Therefore, the nickel reaction occurs in the forward direction (reduction) and the manganese reaction occurs in the reverse direction (oxidation).



▲ FIGURE 19.8 Mn/Ni²⁺ Electrochemical Cell Since the reduction of Mn^{2+} is listed below the reduction of Ni^{2+} in Table 19.1, the reduction of Ni^{2+} is spontaneous when paired with the oxidation of Mn.

Summarizing the Prediction of Spontaneous Direction of Redox Reactions:

- The half-reaction with the more *positive* electrode potential attracts electrons more strongly and undergoes reduction. (Substances listed at the top of Table 19.1 tend to undergo reduction; they are good oxidizing agents.)
- The half-reaction with the more *negative* electrode potential repels electrons more strongly and undergoes oxidation. (Substances listed near the bottom of Table 19.1 tend to undergo oxidation; they are good reducing agents.)
- Any reduction reaction in Table 19.1 is spontaneous when paired with the *reverse* of any of the reactions listed below it on the table.

Recall from Section 8.9 that an *oxidizing* agent causes the oxidation of another substance (and is itself reduced) and that a *reducing* agent causes the reduction of another substance (and is itself oxidized).

EXAMPLE 19.5

Predicting Spontaneous Redox Reactions and Sketching Electrochemical Cells

Without calculating E°_{cell} , predict whether each of these redox reactions is spontaneous (when the reactants and products are in their standard states). If the reaction is spontaneous as written, make a sketch of the electrochemical cell in which the reaction could occur. If the reaction is not spontaneous as written, write an equation for the direction in which the spontaneous reaction occurs and sketch the corresponding electrochemical cell. In your sketches, make sure to label the anode (which should be drawn on the left), the cathode, and the direction of electron flow.

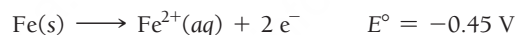
- (a) $\text{Fe(s)} + \text{Mg}^{2+}(\text{aq}) \longrightarrow \text{Fe}^{2+}(\text{aq}) + \text{Mg(s)}$
 (b) $\text{Fe(s)} + \text{Pb}^{2+}(\text{aq}) \longrightarrow \text{Fe}^{2+}(\text{aq}) + \text{Pb(s)}$

SOLUTION

- (a) $\text{Fe(s)} + \text{Mg}^{2+}(\text{aq}) \longrightarrow \text{Fe}^{2+}(\text{aq}) + \text{Mg(s)}$
 This reaction involves the reduction of Mg^{2+} :



and the oxidation of Fe:



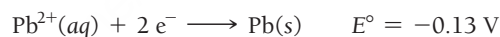
The magnesium half-reaction has the more negative electrode potential and therefore repels electrons more strongly and undergoes oxidation. The iron half-reaction has the more positive electrode potential and therefore attracts electrons more strongly and undergoes reduction. So the reaction as written is *not* spontaneous. (The reaction pairs the reduction of Mg^{2+} with the reverse of a half-reaction *above* it in Table 19.1—such pairings are not spontaneous.)

However, the reverse reaction is spontaneous:

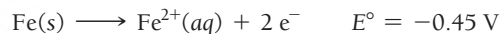


The corresponding electrochemical cell is shown in **Figure 19.9** ◀.

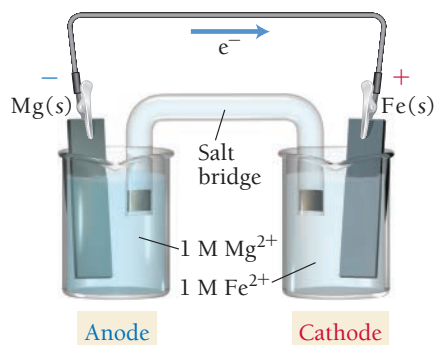
- (b) $\text{Fe(s)} + \text{Pb}^{2+}(\text{aq}) \longrightarrow \text{Fe}^{2+}(\text{aq}) + \text{Pb(s)}$
 This reaction involves the reduction of Pb^{2+} :



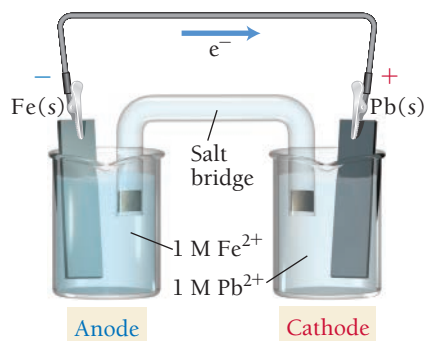
and the oxidation of iron:



The iron half-reaction has the more negative electrode potential and therefore repels electrons and undergoes oxidation. The lead half-reaction has the more positive electrode potential and therefore attracts electrons and undergoes reduction. The reaction is spontaneous as written. (The reaction pairs the reduction of Pb^{2+} with the reverse of a half-reaction *below* it in Table 19.1—such pairings are always spontaneous.) The corresponding electrochemical cell is shown in **Figure 19.10** ◀.



▲ **FIGURE 19.9** Mg/Fe^{2+} Electrochemical Cell



▲ **FIGURE 19.10** Fe/Pb^{2+} Electrochemical Cell

FOR PRACTICE 19.5

Are these redox reactions spontaneous under standard conditions?

- (a) $\text{Zn(s)} + \text{Ni}^{2+}(\text{aq}) \longrightarrow \text{Zn}^{2+}(\text{aq}) + \text{Ni(s)}$
 (b) $\text{Zn(s)} + \text{Ca}^{2+}(\text{aq}) \longrightarrow \text{Zn}^{2+}(\text{aq}) + \text{Ca(s)}$

Selective Oxidation

A solution contains both NaI and NaBr. Which oxidizing agent could you add to the solution to selectively oxidize $\text{I}^-(aq)$ but not $\text{Br}^-(aq)$?

- (a) Cl_2 (b) H_2O_2 (c) CuCl_2 (d) HNO_3

19.3

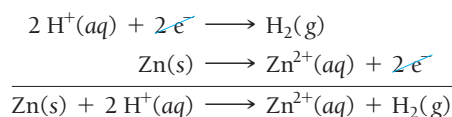
Cc

Conceptual
Connection



Predicting Whether a Metal Will Dissolve in Acid


Recall from Chapter 16 that acids dissolve some metals. Most acids dissolve metals by the reduction of H^+ ions to hydrogen gas and the corresponding oxidation of the metal to its ion. For example, if solid Zn is submersed into hydrochloric acid, the following reaction occurs:



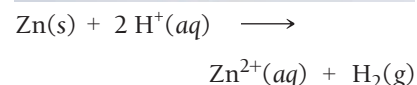
We observe the reaction as the dissolving of the zinc and the bubbling of hydrogen gas. The zinc is oxidized and the H^+ ions are reduced. Notice that this reaction involves the pairing of a reduction half-reaction (the reduction of H^+) with the reverse of a half-reaction that is listed below it in Table 19.1. Therefore, this reaction is spontaneous.

What happens, in contrast, if we pair the reduction of H^+ with the oxidation of Cu? The reaction is not spontaneous because it involves pairing the reduction of H^+ with the reverse of a half-reaction that is listed *above* it in the table. Consequently, copper does not react with H^+ and does not dissolve in acids such as HCl. In general, *metals with reduction half-reactions listed below the reduction of H^+ to H_2 in Table 19.1 dissolve in acids, while metals listed above it do not.*

An important exception to this rule is nitric acid (HNO_3), which can oxidize metals through the reduction half-reaction:



Since this half-reaction is above the reduction of H^+ in Table 19.1, HNO_3 can oxidize metals (such as copper) that can't be oxidized by HCl.



▲ When zinc is immersed in hydrochloric acid, the zinc is oxidized, forming ions that become solvated in the solution. Hydrogen ions are reduced, forming bubbles of hydrogen gas.

Metals Dissolving in Acids

Which metal dissolves in HNO_3 but not in HCl?

- (a) Fe (b) Au (c) Ag

19.4

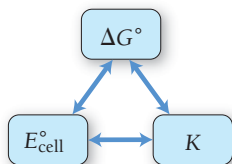
Cc

Conceptual
Connection



19.5 Cell Potential, Free Energy, and the Equilibrium Constant

We have seen that a positive standard cell potential (E_{cell}°) corresponds to a spontaneous oxidation–reduction reaction when the reactants and products are in their standard states (standard conditions). And we know (from Chapter 18) that the spontaneity of a reaction under standard conditions is determined by the sign of ΔG° . Therefore, E_{cell}° and ΔG° must be related. We also know from Section 18.9 that ΔG° for a reaction is related to the equilibrium constant (K) for the reaction. Since E_{cell}° and ΔG° are related, then E_{cell}° and K must also be related.



KEY CONCEPT VIDEO

**Cell Potential, Free Energy,
and the Equilibrium
Constant**

Remember that standard conditions (indicated by the symbol $^\circ$) represent a very specific reaction mixture. For a reaction mixture under standard conditions, $Q = 1$.

Before we look at the nature of each of these relationships in detail, let's consider the following generalizations.

For a spontaneous redox reaction (one that will proceed in the forward direction when all reactants and products are in their standard states):

- ΔG° is negative (< 0)
- E°_{cell} is positive (> 0)
- $K > 1$

For a nonspontaneous reaction (one that will proceed in the reverse direction when all reactants and products are in their standard states):

- ΔG° is positive (> 0)
- E°_{cell} is negative (< 0)
- $K < 1$

The Relationship between ΔG° and E°_{cell}

We can derive a relationship between ΔG° and E°_{cell} by briefly returning to the definition of potential difference from Section 19.3—a potential difference is a measure of the difference of potential energy per unit charge (q):

$$E = \frac{\text{potential energy difference (in J)}}{\text{charge (in C)}}$$

Maximum work (w_{max})
↓
↑
Charge (q)

Since the potential energy difference represents the maximum amount of work that can be done by the system on the surroundings, we can write:

$$w_{\text{max}} = -qE^\circ_{\text{cell}} \quad [19.1]$$

The negative sign follows the convention used throughout this book that work done by the system on the surroundings is negative.

We can quantify the charge (q) that flows in an electrochemical reaction by using **Faraday's constant (F)**, which represents the charge in coulombs of 1 mol of electrons:

$$F = \frac{96,485 \text{ C}}{\text{mol e}^-}$$

The total charge is $q = nF$, where n is the number of moles of electrons from the balanced chemical equation and F is Faraday's constant. Substituting $q = nF$ into Equation 19.1:

$$\begin{aligned} w_{\text{max}} &= -qE^\circ_{\text{cell}} \\ &= -nFE^\circ_{\text{cell}} \end{aligned} \quad [19.2]$$

Finally, recall from Chapter 18 that the standard change in free energy for a chemical reaction (ΔG°) represents the maximum amount of work that can be done by the reaction. Therefore, $w_{\text{max}} = \Delta G^\circ$. Making this substitution into Equation 19.2, we arrive at the following important result:

$$\Delta G^\circ = -nFE^\circ_{\text{cell}} \quad [19.3]$$

where ΔG° is the standard change in free energy for an electrochemical reaction, n is the number of moles of electrons transferred in the balanced equation, F is Faraday's constant, and E°_{cell} is the standard cell potential. Example 19.6 demonstrates how to apply this equation to calculate the standard free energy change for an electrochemical cell.

EXAMPLE 19.6

Relating ΔG° and E°_{cell} Interactive
Worked Example
Video 19.6PEARSON
eText
2.0

Use the tabulated electrode potentials to calculate ΔG° for the reaction.



Is the reaction spontaneous under standard conditions?

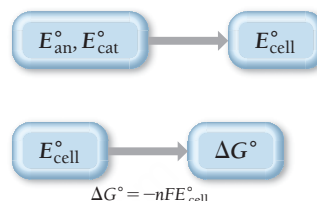
SORT You are given a redox reaction and asked to find ΔG° .

GIVEN: $\text{I}_2(\text{s}) + 2 \text{Br}^-(\text{aq}) \longrightarrow 2 \text{I}^-(\text{aq}) + \text{Br}_2(\text{l})$

FIND: ΔG°

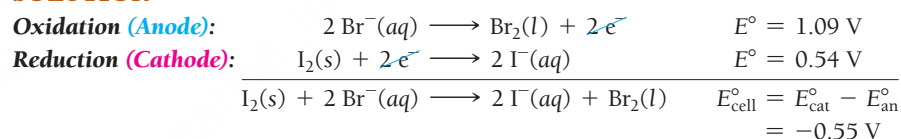
STRATEGIZE Refer to the values of electrode potentials in Table 19.1 to calculate E°_{cell} . Then use Equation 19.3 to calculate ΔG° from E°_{cell} .

CONCEPTUAL PLAN



SOLVE Separate the reaction into oxidation and reduction half-reactions and find the standard electrode potentials for each. Determine E°_{cell} by subtracting E°_{an} from E°_{cat} .

SOLUTION



Calculate ΔG° from E°_{cell} . The value of n (the number of moles of electrons) corresponds to the number of electrons that are canceled in the half-reactions. Remember that $1 \text{ V} = 1 \text{ J/C}$.

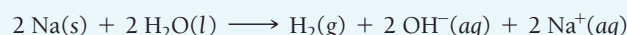
$$\begin{aligned}
 \Delta G^\circ &= -nFE^\circ_{\text{cell}} \\
 &= -2 \text{ mol e}^- \left(\frac{96,485 \text{ C}}{\text{mol e}^-} \right) \left(-0.55 \frac{\text{J}}{\text{C}} \right) \\
 &= +1.1 \times 10^5 \text{ J}
 \end{aligned}$$

Since ΔG° is positive, the reaction is not spontaneous under standard conditions.

CHECK The answer is in the correct units (joules) and seems reasonable in magnitude ($\approx 110 \text{ kJ}$). You have seen (in Chapter 18) that values of ΔG° typically range from plus or minus tens to hundreds of kilojoules. The sign is positive, as expected for a reaction in which E°_{cell} is negative.

FOR PRACTICE 19.6

Use tabulated electrode potentials to calculate ΔG° for the reaction.



Is the reaction spontaneous under standard conditions?

Periodic Trends and the Direction of Spontaneity for Redox Reactions

19.5
CcConceptual
ConnectionPEARSON
eText
2.0

Consider the result of Example 19.6. The calculation revealed that the reaction is not spontaneous. Based on conceptual reasoning, which statement best explains why I_2 does not oxidize Br^- ?

- Br is more electronegative than I; therefore, we do not expect Br^- to give up an electron to I_2 .
- I is more electronegative than Br; therefore, we do not expect I_2 to give up an electron to Br^- .
- Br^- is in solution and I_2 is a solid. Solids do not gain electrons from substances in solution.

The Relationship between E°_{cell} and K

We can derive a relationship between the standard cell potential (E°_{cell}) and the equilibrium constant for the redox reaction occurring in the cell (K) by returning to the relationship between ΔG° and K that we learned in Chapter 18. Recall from Section 18.9 that:

$$\Delta G^\circ = -RT \ln K \quad [19.4]$$

By setting Equations 19.3 and 19.4 equal to each other, we get:

$$\begin{aligned} -nFE^\circ_{\text{cell}} &= -RT \ln K \\ E^\circ_{\text{cell}} &= \frac{RT}{nF} \ln K \end{aligned} \quad [19.5]$$

Equation 19.5 is usually simplified for use at 25°C with the following substitutions:

$$R = 8.314 \frac{\text{J}}{\text{mol} \cdot \text{K}}; T = 298.15 \text{ K}; F = \left(\frac{96,485 \text{ C}}{\text{mol } e^-} \right); \text{ and } \ln K = 2.303 \log K$$

Substituting into Equation 19.5, we get the following important result:

$$E^\circ_{\text{cell}} = \frac{0.0592 \text{ V}}{n} \log K \quad [19.6]$$

where E°_{cell} is the standard cell potential, n is the number of moles of electrons transferred in the redox reaction, and K is the equilibrium constant for the balanced redox reaction at 25°C. Example 19.7 demonstrates the use of Equation 19.6.

EXAMPLE 19.7

Relating E°_{cell} and K

Refer to tabulated electrode potentials to calculate K for the oxidation of copper by H^+ (at 25°C).

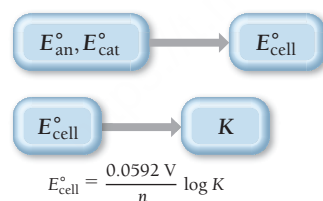


SORT You are given a redox reaction and asked to find K .

GIVEN: $\text{Cu(s)} + 2 \text{H}^+(\text{aq}) \longrightarrow \text{Cu}^{2+}(\text{aq}) + \text{H}_2(\text{g})$
FIND: K

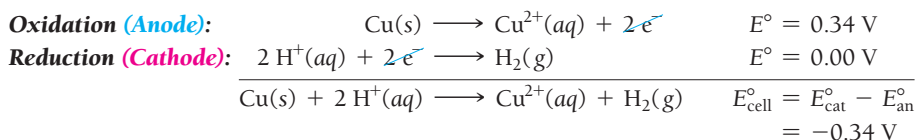
STRATEGIZE Refer to the values of electrode potentials in Table 19.1 to calculate E°_{cell} . Use Equation 19.6 to calculate K from E°_{cell} .

CONCEPTUAL PLAN



SOLVE Separate the reaction into oxidation and reduction half-reactions and find the standard electrode potentials for each. Find E°_{cell} by subtracting E°_{an} from E°_{cat} .

SOLUTION




Calculate K from E°_{cell} . The value of n (the number of moles of electrons) corresponds to the number of electrons that are canceled in the half-reactions.

$$\begin{aligned} E^\circ_{\text{cell}} &= \frac{0.0592 \text{ V}}{n} \log K \\ \log K &= E^\circ_{\text{cell}} \frac{n}{0.0592 \text{ V}} \\ \log K &= -0.34 \text{ V} \frac{2}{0.0592 \text{ V}} = -11.48 \\ K &= 10^{-11.48} = 3.3 \times 10^{-12} \end{aligned}$$

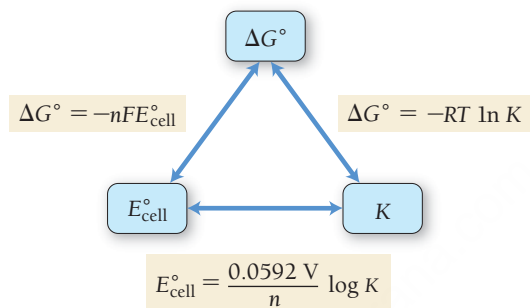
CHECK The answer has no units, as expected for an equilibrium constant. The magnitude of the answer is small, indicating that the reaction lies far to the left at equilibrium, as expected for a reaction in which E_{cell}° is negative.

FOR PRACTICE 19.7

Use the tabulated electrode potentials to calculate K for the oxidation of iron by H^{+} (at 25°C).



Notice that the fundamental quantity in the given relationships is the standard change in free energy for a chemical reaction ($\Delta G_{\text{rxn}}^{\circ}$). From that quantity, we can calculate both E_{cell}° and K . The following diagram summarizes the relationships between these three quantities:



Relating K , $\Delta G_{\text{rxn}}^{\circ}$, and E_{cell}°

A redox reaction has an equilibrium constant of $K = 1.2 \times 10^3$. Which statement is true regarding $\Delta G_{\text{rxn}}^{\circ}$ and E_{cell}° for this reaction?

- (a) E_{cell}° is positive and $\Delta G_{\text{rxn}}^{\circ}$ is positive.
- (b) E_{cell}° is negative and $\Delta G_{\text{rxn}}^{\circ}$ is negative.
- (c) E_{cell}° is positive and $\Delta G_{\text{rxn}}^{\circ}$ is negative.
- (d) E_{cell}° is negative and $\Delta G_{\text{rxn}}^{\circ}$ is positive.

19.6

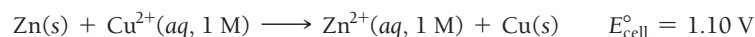


Conceptual
Connection

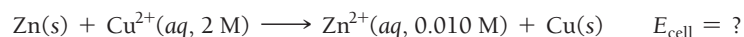


19.6 Cell Potential and Concentration

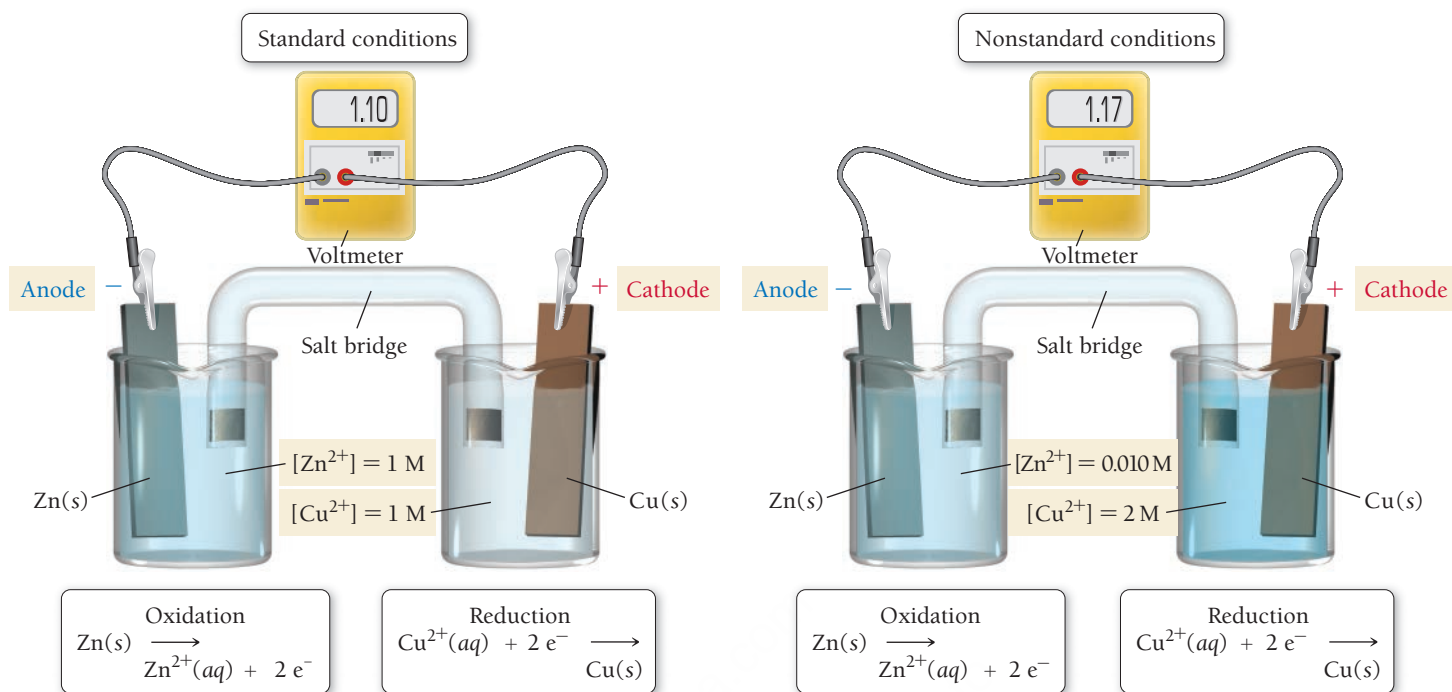
We have learned how to find E_{cell}° under standard conditions. For example, we know that when $[\text{Cu}^{2+}] = 1 \text{ M}$ and $[\text{Zn}^{2+}] = 1 \text{ M}$, the following reaction produces a potential of 1.10 V:



But what if $[\text{Cu}^{2+}] > 1 \text{ M}$ and $[\text{Zn}^{2+}] < 1 \text{ M}$? For example, how is the cell potential for the following conditions different from the potential under standard conditions?



Since the concentration of a reactant is greater than standard conditions, and since the concentration of product is less than standard conditions, we can use Le Châtelier's principle to predict that the reaction has an even stronger tendency to occur in the forward direction and that E_{cell} is therefore greater than +1.10 V (**Figure 19.11** ► on the next page).



▲ FIGURE 19.11 Cell Potential and Concentration This figure compares the Zn/Cu²⁺ electrochemical cell under standard and nonstandard conditions. In this case, the nonstandard conditions consist of a higher Cu²⁺ concentration ([Cu²⁺] > 1 M) at the cathode and a lower Zn²⁺ concentration at the anode ([Zn²⁺] < 1 M). According to Le Châtelier's principle, the forward reaction has a greater tendency to occur, resulting in a greater overall cell potential than the potential under standard conditions.

Cell Potential under Nonstandard Conditions: The Nernst Equation

We can derive an exact relationship between E_{cell} (under nonstandard conditions) and E_{cell}° by considering the relationship between the change in free energy (ΔG) and the *standard* change in free energy (ΔG°) from Section 18.8:

$$\Delta G = \Delta G^{\circ} + RT \ln Q \quad [19.7]$$

where R is the gas constant (8.314 J/mol·K), T is the temperature in kelvins, and Q is the reaction quotient corresponding to the nonstandard conditions.

Because we know the relationship between ΔG and E_{cell} (Equation 19.3), we can substitute into Equation 19.7:

$$\begin{aligned} \Delta G &= \Delta G^{\circ} + RT \ln Q \\ -nFE_{\text{cell}} &= -nFE_{\text{cell}}^{\circ} + RT \ln Q \end{aligned}$$

We can then divide each side by $-nF$ to arrive at:

$$E_{\text{cell}} = E_{\text{cell}}^{\circ} - \frac{RT}{nF} \ln Q \quad [19.8]$$

As we have seen, R and F are constants; at $T = 25^{\circ}\text{C}$, $\frac{RT}{nF} \ln Q = \frac{0.0592 \text{ V}}{n} \log Q$. Substituting into Equation 19.8, we arrive at the **Nernst equation**:

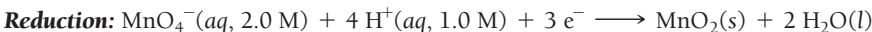
$$E_{\text{cell}} = E_{\text{cell}}^{\circ} - \frac{0.0592 \text{ V}}{n} \log Q \quad [19.9]$$

where E_{cell} is the cell potential in volts, E_{cell}° is the *standard* cell potential in volts, n is the number of moles of electrons transferred in the redox reaction, and Q is the reaction quotient. Notice that, under standard conditions, $Q = 1$, and (since $\log 1 = 0$) $E_{\text{cell}} = E_{\text{cell}}^{\circ}$, as expected. Example 19.8 demonstrates how to calculate the cell potential under nonstandard conditions.

EXAMPLE 19.8

Calculating E_{cell} under Nonstandard Conditions

Determine the cell potential for an electrochemical cell based on the following two half-reactions:



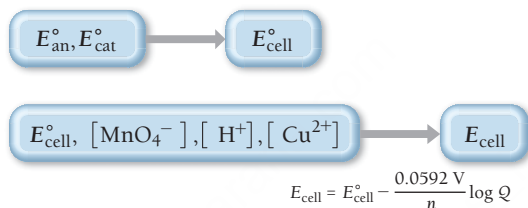
SORT You are given the half-reactions for a redox reaction and the concentrations of the aqueous reactants and products. You are asked to find the cell potential.

GIVEN: $[\text{MnO}_4^{-}] = 2.0 \text{ M}$; $[\text{H}^{+}] = 1.0 \text{ M}$; $[\text{Cu}^{2+}] = 0.010 \text{ M}$

FIND: E_{cell}

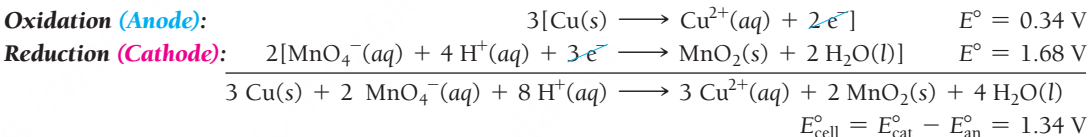
STRATEGIZE Use the tabulated values of electrode potentials to calculate E_{cell}° . Then use Equation 19.9 to calculate E_{cell} .

CONCEPTUAL PLAN



SOLVE Write the oxidation and reduction half-reactions, multiplying by the appropriate coefficients to cancel the electrons. Find the standard electrode potentials for each. Find E_{cell}° .

SOLUTION



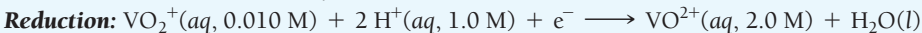
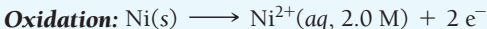
Calculate E_{cell} from E_{cell}° . The value of n (the number of moles of electrons) corresponds to the number of electrons (six in this case) canceled in the half-reactions. Determine Q based on the overall balanced equation and the given concentrations of the reactants and products. (Note that pure liquid water, solid MnO_2 , and solid copper are omitted from the expression for Q .)

$$\begin{aligned} E_{\text{cell}} &= E_{\text{cell}}^{\circ} - \frac{0.0592 \text{ V}}{n} \log Q \\ &= E_{\text{cell}}^{\circ} - \frac{0.0592 \text{ V}}{n} \log \frac{[\text{Cu}^{2+}]^3}{[\text{MnO}_4^{-}]^2 [\text{H}^{+}]^8} \\ &= 1.34 \text{ V} - \frac{0.0592 \text{ V}}{6} \log \frac{(0.010)^3}{(2.0)^2 (1.0)^8} \\ &= 1.34 \text{ V} - (-0.065 \text{ V}) \\ &= 1.41 \text{ V} \end{aligned}$$

CHECK The answer has the correct units (V). The value of E_{cell} is larger than E_{cell}° , as expected, based on Le Châtelier's principle, because one of the aqueous reactants has a concentration greater than standard conditions and the one aqueous product has a concentration less than standard conditions. Therefore, the reaction has a greater tendency to proceed toward products and a greater cell potential.

FOR PRACTICE 19.8

Determine the cell potential of an electrochemical cell based on the following two half-reactions:



From Equation 19.9, we can conclude the following:


- When a redox reaction within a voltaic cell occurs under standard conditions $Q = 1$; therefore, $E_{\text{cell}} = E_{\text{cell}}^{\circ}$.

$$\begin{aligned} E_{\text{cell}} &= E_{\text{cell}}^{\circ} - \frac{0.0592 \text{ V}}{n} \log Q \\ &= E_{\text{cell}}^{\circ} - \frac{0.0592 \text{ V}}{n} \log 1 \quad \log 1 = 0 \\ &= E_{\text{cell}}^{\circ} \end{aligned}$$

- When a redox reaction within a voltaic cell occurs under conditions in which $Q < 1$, the greater concentration of reactants relative to products drives the reaction to the right, resulting in $E_{\text{cell}} > E_{\text{cell}}^{\circ}$.
- When a redox reaction within an electrochemical cell occurs under conditions in which $Q > 1$, the greater concentration of products relative to reactants drives the reaction to the left, resulting in $E_{\text{cell}} < E_{\text{cell}}^{\circ}$.
- When a redox reaction reaches equilibrium, $Q = K$. The redox reaction has no tendency to occur in either direction and $E_{\text{cell}} = 0$.

$$\begin{aligned} E_{\text{cell}} &= E_{\text{cell}}^{\circ} - \frac{0.0592 \text{ V}}{n} \log Q \quad E_{\text{cell}}^{\circ} \quad (\text{see Equation 19.6}) \\ &= E_{\text{cell}}^{\circ} - \frac{0.0592 \text{ V}}{n} \log K \\ &= E_{\text{cell}}^{\circ} - E_{\text{cell}}^{\circ} \\ &= 0 \end{aligned}$$

This last point explains why batteries do not last forever—as the reactants are depleted, the reaction proceeds toward equilibrium and the potential tends toward zero.



19.7 Cc

Conceptual Connection


Relating Q , K , E_{cell} , and E_{cell}°

In an electrochemical cell, $Q = 0.0010$ and $K = 0.10$. What can you conclude about E_{cell} and E_{cell}° ?

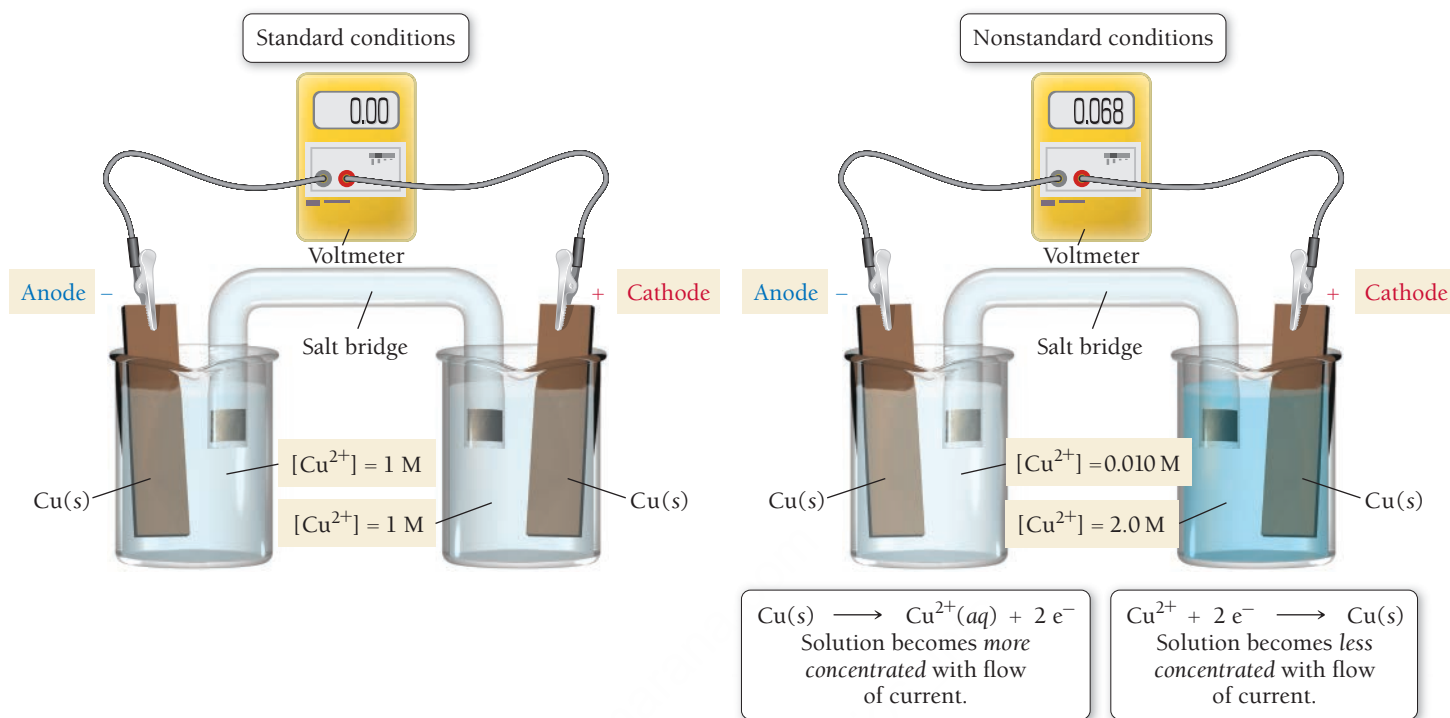
- E_{cell} is positive and E_{cell}° is negative.
- E_{cell} is negative and E_{cell}° is positive.
- Both E_{cell} and E_{cell}° are positive.
- Both E_{cell} and E_{cell}° are negative.

Concentration Cells

Since cell potential depends not only on the half-reactions occurring in the cell, but also on the *concentrations* of the reactants and products in those half-reactions, we can construct a voltaic cell in which both half-reactions are the same but in which a *difference in concentration drives the current flow*. For example, consider the electrochemical cell shown in **Figure 19.12** ▶, in which copper is oxidized at the anode and copper(II) ions are reduced at the cathode. The second part of Figure 19.12 depicts this cell under nonstandard conditions, with $[\text{Cu}^{2+}] = 2.0 \text{ M}$ in one half-cell and $[\text{Cu}^{2+}] = 0.010 \text{ M}$ in the other:

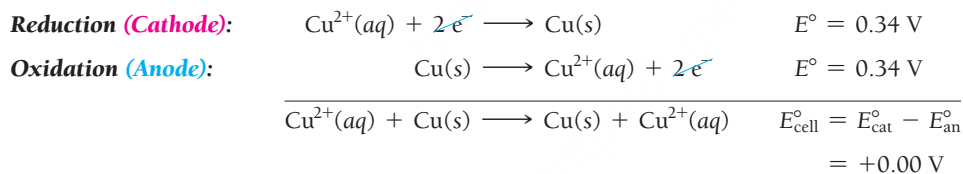


A Concentration Cell



▲ **FIGURE 19.12 Cu/Cu²⁺ Concentration Cell** If two half-cells have the same Cu^{2+} concentration, the cell potential is zero. If one half-cell has a greater Cu^{2+} concentration than the other, a spontaneous reaction occurs. In the reaction, Cu^{2+} ions in the more concentrated cell are reduced (to solid copper), while Cu^{2+} ions in the more dilute cells are formed (from solid copper). The concentration of copper(II) ions in the two half-cells tends toward equality.

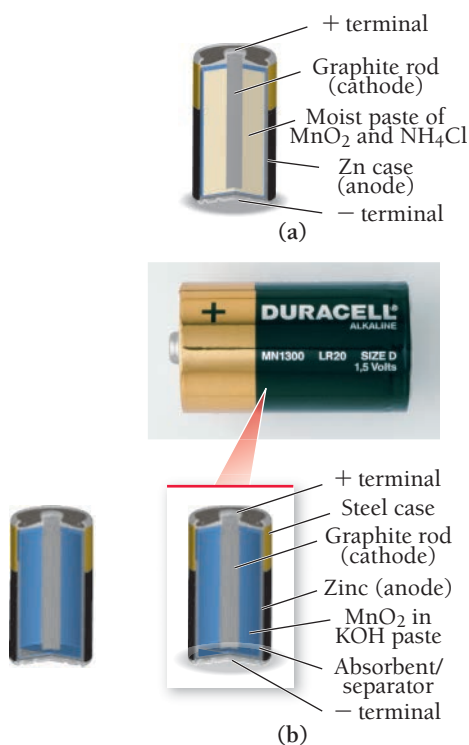
The half-reactions are identical, so the *standard* cell potential is zero.



Because of the different concentrations in the two half-cells, we must calculate the cell potential using the Nernst equation.

$$\begin{aligned}
 E_{\text{cell}} &= E_{\text{cell}}^\circ - \frac{0.0592\text{ V}}{2} \log \frac{0.010}{2.0} \\
 &= 0.000\text{ V} + 0.068\text{ V} \\
 &= 0.068\text{ V}
 \end{aligned}$$

The cell produces a potential of 0.068 V. *Electrons spontaneously flow from the half-cell with the lower copper ion concentration to the half-cell with the higher copper ion concentration.* We can imagine a concentration cell in the same way we think about any concentration gradient. If we mix a concentrated solution of Cu^{2+} with a dilute solution, the Cu^{2+} ions flow from the concentrated solution to the dilute one. Similarly, in a concentration cell, the transfer of electrons *from* the dilute half-cell results in the formation of Cu^{2+} ions in the dilute half-cell. The electrons flow to the concentrated cell, where they react with Cu^{2+} ions and reduce them to Cu(s) . Therefore, *the flow of electrons has the effect of increasing the concentration of Cu^{2+} in the dilute cell and decreasing the concentration of Cu^{2+} in the concentrated half-cell.*



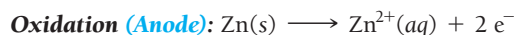
▲ FIGURE 19.13 Dry-Cell Battery
(a) In a common dry-cell battery, the zinc case acts as the anode and a graphite rod immersed in a moist, slightly acidic paste of MnO_2 and NH_4Cl acts as the cathode. **(b)** The longer-lived alkaline batteries employ a graphite cathode immersed in a paste of MnO_2 and a base.

19.7 Batteries: Using Chemistry to Generate Electricity

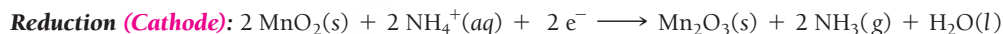
We have seen that we can combine the electron-losing tendency of one substance with the electron-gaining tendency of another to create electrical current in a voltaic cell. Batteries are voltaic cells conveniently packaged to act as portable sources of electricity. The oxidation and reduction reactions depend on the particular type of battery. In this section, we examine several different types.

Dry-Cell Batteries

Common batteries, such as the kind you find in a flashlight, are called **dry-cell batteries** because they do not contain large amounts of liquid water. There are several familiar types of dry-cell batteries. The most inexpensive are composed of a zinc case that acts as the anode (**Figure 19.13(a)** ◀). The zinc is oxidized according to the reaction:

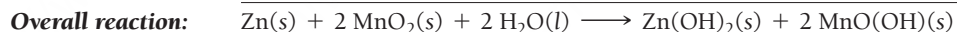
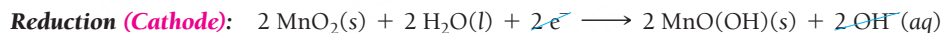
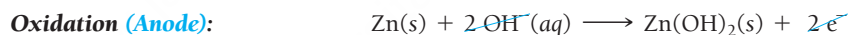


The cathode is a carbon rod immersed in a moist paste of MnO_2 that also contains NH_4Cl . The MnO_2 is reduced to Mn_2O_3 according to the reaction:



These two half-reactions produce a voltage of about 1.5 V. Two or more of these batteries can be connected in series (cathode-to-anode connection) to produce higher voltages.

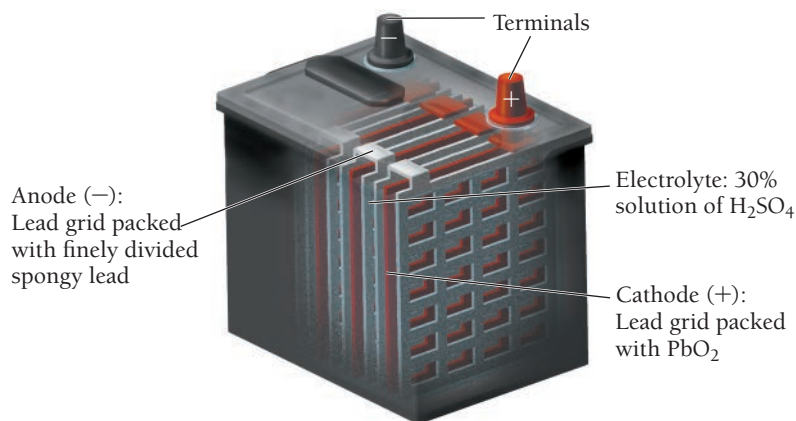
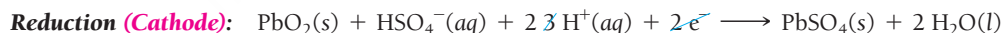
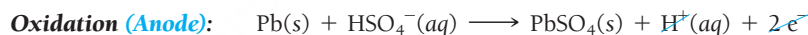
The more common **alkaline batteries** (**Figure 19.13(b)** ◀) employ slightly different half-reactions in a basic medium (therefore the name alkaline). In an alkaline battery, the zinc is oxidized in a basic environment:



Alkaline batteries have a longer working life and a longer shelf life than their nonalkaline counterparts.

Lead–Acid Storage Batteries

The batteries in most automobiles are **lead–acid storage batteries**. These batteries consist of six electrochemical cells wired in series (**Figure 19.14** ▼). Each cell produces 2 V, for a total of 12 V. Each cell contains a porous lead anode where oxidation occurs and a lead(IV) oxide cathode where reduction occurs according to the reactions:



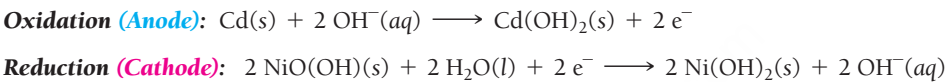
► FIGURE 19.14 Lead–Acid Storage Battery A lead–acid storage battery consists of six cells wired in series. Each cell contains a porous lead anode and a lead oxide cathode, both immersed in sulfuric acid.

Both the anode and the cathode are immersed in sulfuric acid (H₂SO₄). As electrical current is drawn from the battery, both electrodes become coated with PbSO₄(s). If the battery is run for a long time without recharging, too much PbSO₄(s) builds up on the surface of the electrodes and the battery goes dead. The lead–acid storage battery can be recharged by an electrical current (which must come from an external source such as an alternator in a car). The current causes the preceding reaction to occur in reverse, converting the PbSO₄(s) back to Pb(s) and PbO₂(s).

Other Rechargeable Batteries

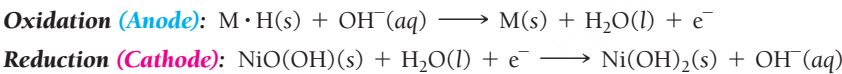
The ubiquity of electronic products such as laptops, tablets, cell phones, and digital cameras, as well as the growth in popularity of hybrid electric vehicles, drives the need for efficient, long-lasting, rechargeable batteries. Common types include the **nickel–cadmium (NiCad) battery**, the **nickel–metal hydride (NiMH) battery**, and the **lithium ion battery**.

The Nickel–Cadmium (NiCad) Battery Nickel–cadmium batteries consist of an anode composed of solid cadmium and a cathode composed of NiO(OH)(s). The electrolyte is usually KOH(aq). During operation, the cadmium is oxidized and the NiO(OH) is reduced according to these equations:



The overall reaction produces about 1.30 V. As current is drawn from the NiCad battery, solid cadmium hydroxide accumulates on the anode and solid nickel(II) hydroxide accumulates on the cathode. However, by running current in the opposite direction, the reactants can be regenerated from the products. A common problem in recharging NiCad and other rechargeable batteries is knowing when to stop. Once all of the products of the reaction are converted back to reactants, the charging process should ideally terminate—otherwise the electrical current will drive other, usually unwanted, reactions such as the electrolysis of water to form hydrogen and oxygen gas. These reactions typically damage the battery and may sometimes even cause an explosion. Consequently, most commercial battery chargers have sensors that measure when the charging is complete. These sensors rely on the small changes in voltage or increases in temperature that occur once the products have all been converted back to reactants.

The Nickel–Metal Hydride (NiMH) Battery Although NiCad batteries were the standard rechargeable battery for many years, they are being replaced by other types of rechargeable batteries, in part because of the toxicity of cadmium and the resulting disposal problems. One of these replacements is the nickel–metal hydride or NiMH battery. The NiMH battery employs the same cathode reaction as the NiCad battery but a different anode reaction. In the anode of a NiMH battery, hydrogen atoms held in a metal alloy are oxidized. If we let M represent the metal alloy, we can write the half-reactions as follows:



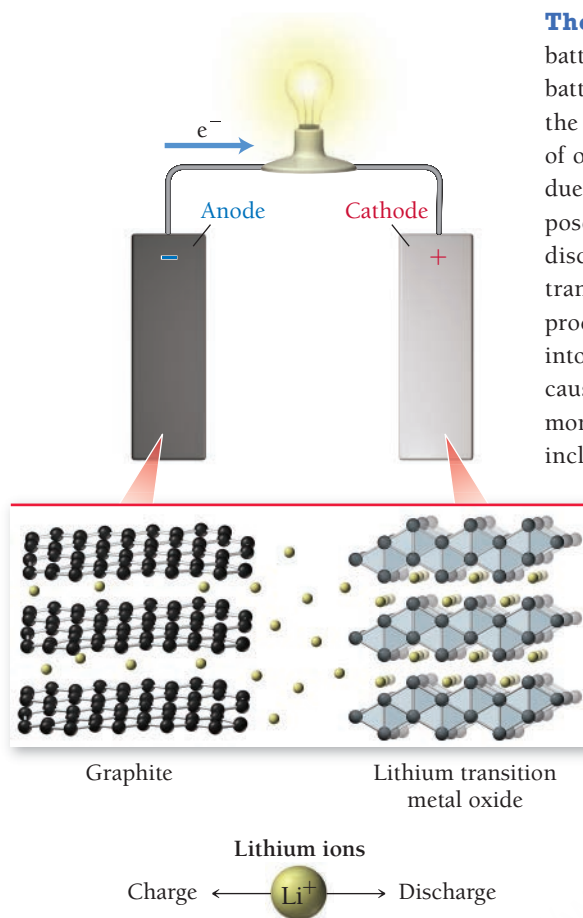
In addition to being more environmentally friendly than NiCad batteries, NiMH batteries also have a greater energy density (energy content per unit battery mass), as we can see in Table 19.2. In some cases, a NiMH battery can carry twice the energy of a NiCad battery of the same mass, making NiMH batteries the most common choice for hybrid electric vehicles.



▲ Several types of batteries, including NiCad, NiMH, and lithium ion batteries, are recharged by chargers that use household current.

TABLE 19.2 Energy Density and Overcharge Tolerance of Several Rechargeable Batteries

Battery Type	Energy Density (W · h / kg)	Overcharge Tolerance
NiCad	45–80	Moderate
NiMH	60–120	Low
Li ion	110–160	Low
Pb storage	30–50	High




▲ **FIGURE 19.15 Lithium Ion Battery** In the lithium ion battery, the spontaneous flow of lithium ions from the graphite anode to the lithium transition metal oxide cathode causes a corresponding flow of electrons in the external circuit.

The Lithium Ion Battery The newest and most expensive common type of rechargeable battery is the lithium ion battery. Since lithium is the least dense metal (0.53 g/cm^3), lithium batteries have high-energy densities (see Table 19.2). The lithium battery works differently than the other batteries we have examined so far, and the details of its operation are beyond the scope of our current discussion. Briefly, we can describe the operation of the lithium battery as being due primarily to the motion of lithium ions from the anode to the cathode. The anode is composed of graphite into which lithium ions are incorporated between layers of carbon atoms. Upon discharge, the lithium ions spontaneously migrate to the cathode, which consists of a lithium transition metal oxide such as LiCoO_2 or LiMn_2O_4 . The transition metal is reduced during this process. Upon recharging, the transition metal is oxidized, forcing the lithium to migrate back into the graphite (**Figure 19.15** ◀). The flow of lithium ions from the anode to the cathode causes a corresponding flow of electrons in the external circuit. Lithium ion batteries are commonly used in applications where light weight and high-energy density are important. These include cell phones, laptop computers, and digital cameras.

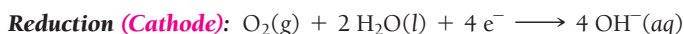
Fuel Cells

Fuel cells are like batteries; the key difference is that a battery is self-contained, while in a fuel cell the reactants need to be constantly replenished from an external source. With use, normal batteries lose their ability to generate voltage because the reactants become depleted as electrical current is drawn from the battery. In a **fuel cell**, the reactants—the fuel provided from an external source—constantly flow through the battery, generating electrical current as they undergo a redox reaction. Fuel cells may one day replace—or at least work in combination with—centralized power grid electricity. In addition, vehicles powered by fuel cells may one day usurp vehicles powered by internal combustion engines.

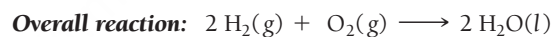
The most common fuel cell is the hydrogen–oxygen fuel cell. In this cell, hydrogen gas flows past the anode (a screen coated with platinum catalyst) and undergoes oxidation:



Oxygen gas flows past the cathode (a similar screen) and undergoes reduction:



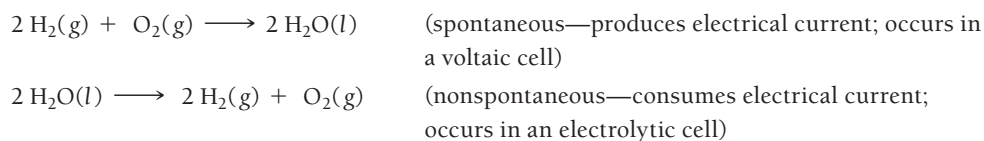
The half-reactions sum to the following overall reaction:



Notice that the only product is water. In the space shuttle program, hydrogen–oxygen fuel cells consume hydrogen to provide electricity, and astronauts drink the water that is produced by the reaction. In order for hydrogen-powered fuel cells to become more widely used, a more readily available source of hydrogen must be developed.

19.8 Electrolysis: Driving Nonspontaneous Chemical Reactions with Electricity

In a voltaic cell, a spontaneous redox reaction produces electrical current. In an *electrolytic cell*, electrical current drives an otherwise nonspontaneous redox reaction through a process called **electrolysis**. We have seen that the reaction of hydrogen with oxygen to form water is spontaneous and can be used to produce an electrical current in a fuel cell. Conversely, by *supplying* electrical current, we can cause the reverse reaction to occur, separating water into hydrogen and oxygen (**Figure 19.16** ▶).



Electrolysis of Water

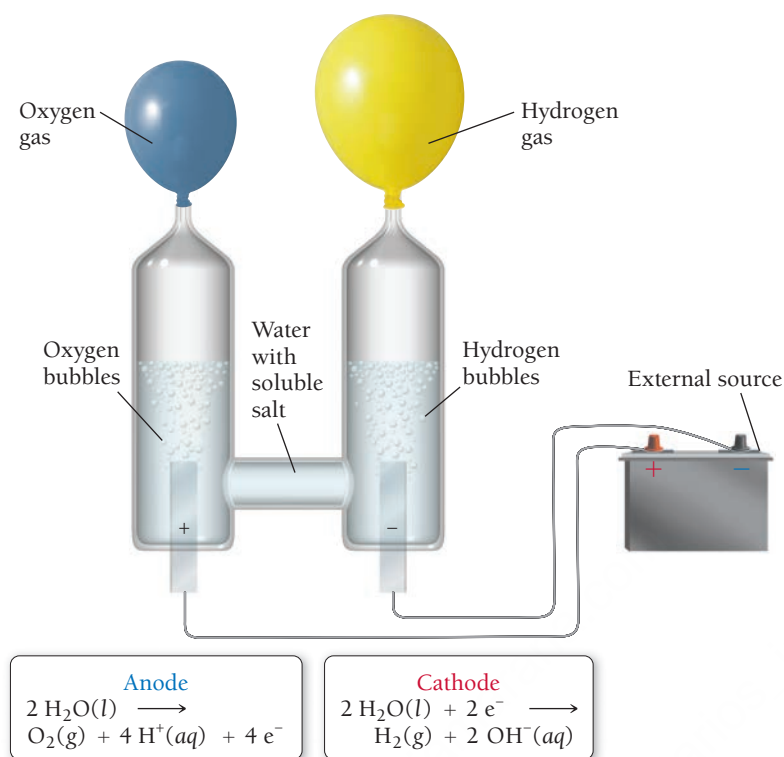


FIGURE 19.16 Electrolysis of Water Electrical current can decompose water into hydrogen and oxygen gas.

Recall from the previous section that one of the problems prohibiting the widespread adoption of hydrogen fuel cells is the scarcity of hydrogen. Where will the hydrogen to power these fuel cells come from? One possible answer is to obtain hydrogen from water through solar-powered electrolysis. A solar-powered electrolytic cell can produce hydrogen from water when the sun is shining. The hydrogen made in this way could be converted back to water to generate electricity and could also be used to power fuel-cell vehicles.

Electrolysis also has numerous other applications. For example, most metals are found in Earth's crust as metal oxides. Converting an oxide to a pure metal requires that the metal be reduced, a nonspontaneous process. Electrolysis can be used to produce these metals. Thus, sodium is produced by the electrolysis of molten sodium chloride (discussed in the following subsection). Electrolysis is also used to plate metals onto other metals. For example, silver can be plated onto a less expensive metal using the electrolytic cell shown in **Figure 19.17**. In this cell, a silver electrode is placed in a solution containing silver ions. An electrical current causes the oxidation of silver at the anode (replenishing the silver ions in solution) and the reduction of silver ions at the cathode (coating the less expensive metal with solid silver).

Oxidation (Anode): $\text{Ag}(s) \longrightarrow \text{Ag}^+(aq) + e^-$

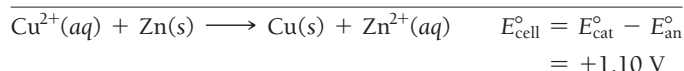
Reduction (Cathode): $\text{Ag}^+(aq) + e^- \longrightarrow \text{Ag}(s)$

Since the standard cell potential of the reaction is zero, the reaction is not spontaneous under standard conditions. An external power source drives current flow and causes the reaction to occur.

The voltage required to cause electrolysis depends on the specific half-reactions. For example, we have seen that the oxidation of zinc and the reduction of Cu^{2+} produces a voltage of 1.10 V under standard conditions.

Reduction (Cathode): $\text{Cu}^{2+}(aq) + 2e^- \longrightarrow \text{Cu}(s) \quad E^\circ = 0.34 \text{ V}$

Oxidation (Anode): $\text{Zn}(s) \longrightarrow \text{Zn}^{2+}(aq) + 2e^- \quad E^\circ = -0.76 \text{ V}$



Electrolytic Cell for Silver Plating

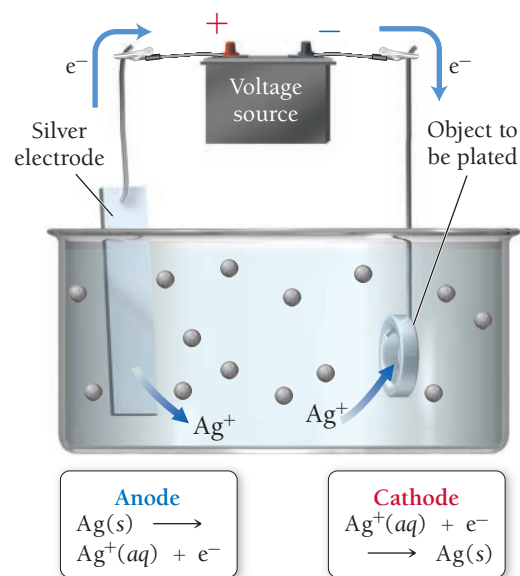
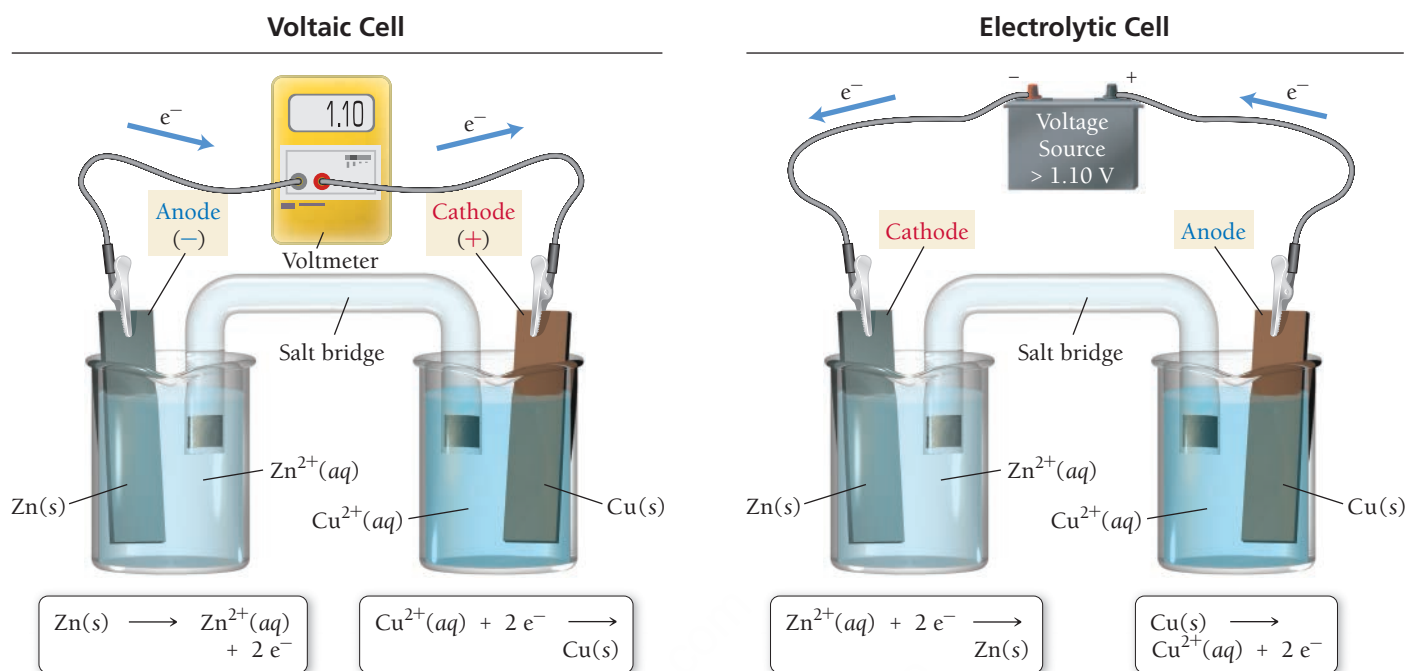


FIGURE 19.17 Silver Plating Silver from a solution of silver ions can be plated onto metallic objects in an electrolytic cell.



▲ **FIGURE 19.18 Voltaic versus Electrolytic Cells** In a Zn/Cu²⁺ voltaic cell, the reaction proceeds in the spontaneous direction. In a Zn²⁺/Cu electrolytic cell, electrical current drives the reaction in the nonspontaneous direction.

If a power source producing *more than 1.10 V* is inserted into the Zn/Cu²⁺ voltaic cell, electrons can be forced to flow in the opposite direction, causing the reduction of Zn²⁺ and the oxidation of Cu, as shown in **Figure 19.18** ▲. Notice that in the electrolytic cell, the anode has become the cathode (oxidation always occurs at the anode) and the cathode has become the anode.

In a *voltaic cell*, the anode is the source of electrons and is therefore labeled with a negative charge. The cathode draws electrons and is therefore labeled with a positive charge. In an *electrolytic cell*, however, the source of the electrons is the external power source. The external power source must *draw electrons away* from the anode; thus, the anode must be connected to the positive terminal of the battery (as shown in Figure 19.18). Similarly, the power source drives electrons toward the cathode (where they will be used in reduction), so the cathode must be connected to the *negative* terminal of the battery. The charge labels (+ and -) on an electrolytic cell are the opposite of what they are in a voltaic cell.

Summarizing Characteristics of Electrochemical Cell Types:

In all electrochemical cells:

- Oxidation occurs at the anode.
- Reduction occurs at the cathode.

In voltaic cells:

- The anode is the source of electrons and has a negative charge (anode -).
- The cathode draws electrons and has a positive charge (cathode +).

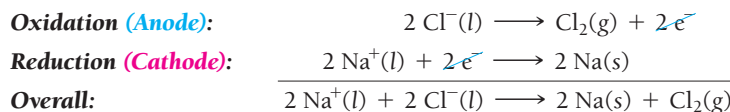
In electrolytic cells:

- Electrons are drawn away from the anode, which must be connected to the positive terminal of the external power source (anode +).
- Electrons are driven to the cathode, which must be connected to the negative terminal of the power source (cathode -).

Predicting the Products of Electrolysis

Predicting the products of an electrolysis reaction is in some cases relatively straightforward and in other cases more complex. We cover the simpler cases first and then discuss the more complex ones.

Pure Molten Salts Consider the electrolysis of a molten salt such as sodium chloride, shown in **Figure 19.19**. Na^+ and Cl^- are the only species present in the cell. The chloride ion cannot be further reduced (-1 is its lowest oxidation state), so it must be oxidized. The sodium ion cannot be further oxidized ($+1$ is its highest oxidation state), so it must be reduced. Thus, we can write the half-reactions:

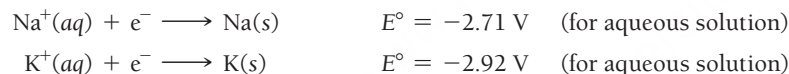


Although the reaction as written is not spontaneous, it can be driven to occur in an electrolytic cell by an external power source. We can generalize as follows:

- In the electrolysis of a pure molten salt, the anion is oxidized and the cation is reduced.

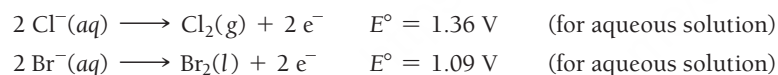
Mixtures of Cations or Anions What if a molten salt contains more than one anion or cation? For example, suppose the electrolysis cell we just introduced contains both NaCl and KCl . Which of the two cations is reduced at the cathode? To answer this question, we must determine which of the two cations is more easily reduced.

Although the values of electrode potentials for aqueous solutions given in Table 19.1 do not apply to molten salts, the relative ordering of the electrode potentials does reflect the relative ease with which the metal cations are reduced. We can see from the table that the reduction of Na^+ is above the reduction of K^+ ; that is, Na^+ has a more positive electrode potential.



Therefore, Na^+ is easier to reduce than K^+ . Consequently, in a mixture of NaCl and KCl , Na^+ has a greater tendency to be reduced at the cathode.

Similarly, what if a mixture of molten salts contained more than one anion? For example, in a mixture of NaBr and NaCl , which of the two anions is oxidized at the cathode? The answer is similar: the anion that is more easily oxidized (the one with the more negative electrode potential).

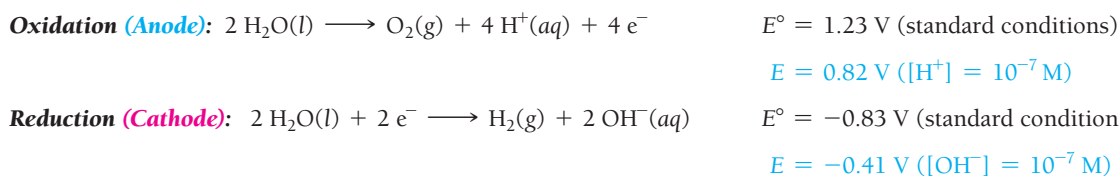


Since the electrode potential for the bromine half-reaction is more negative, electrons are more easily extracted from it. The bromide ion is therefore oxidized at the anode.

We can generalize as follows:

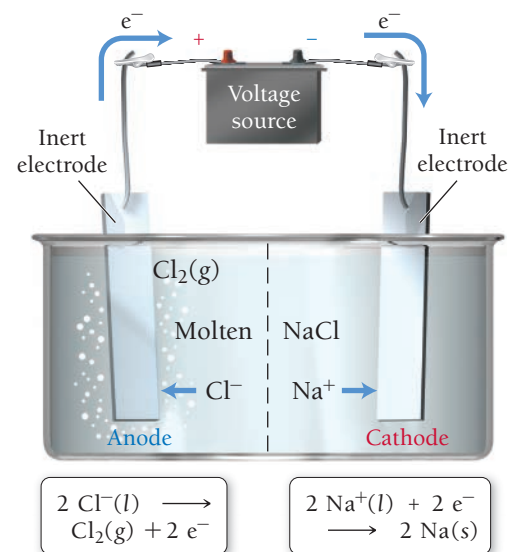
- The cation that is most easily reduced (the one with the more positive electrode potential) is reduced first.
- The anion that is most easily oxidized (the one with the more negative electrode potential) is oxidized first.

Aqueous Solutions Electrolysis in an aqueous solution is complicated by the possibility of the electrolysis of water itself. Recall that water can be either oxidized or reduced according to the following half-reactions:



The electrode potentials under standard conditions are shown to the right of each half-reaction. However, in pure water at room temperature, the concentrations of H^+ and OH^- are not standard. The electrode

Electrolysis of a Molten Salt




▲ FIGURE 19.19 Electrolysis of Molten NaCl In the electrolysis of a pure molten salt, the anion (in this case Cl^-) is oxidized and the cation (in this case Na^+) is reduced.

Throughout this discussion, “more positive” means the same thing as “less negative.”

Throughout this discussion, “more negative” means the same thing as “less positive.”

Remember NIO and PIR: **N.I.O.**—More Negative Is Oxidation **P.I.R.**—More Positive Is Reduction



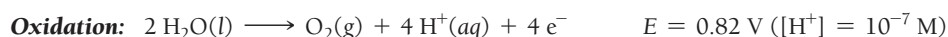
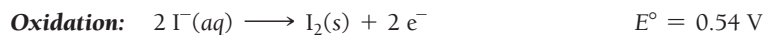
▲ Pure water is a poor conductor of electrical current, but the addition of an electrolyte allows electrolysis to take place, producing hydrogen and oxygen gas in a stoichiometric ratio.

potentials for $[\text{H}^+] = 10^{-7} \text{ M}$ and $[\text{OH}^-] = 10^{-7} \text{ M}$ are shown in blue. Using those electrode potentials, we can calculate E_{cell} for the electrolysis of water as follows:

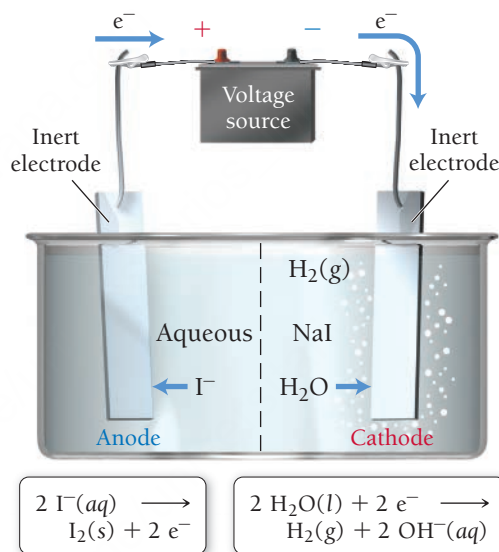
$$E_{\text{cell}} = E_{\text{cat}} - E_{\text{an}} = -0.41 \text{ V} - 0.82 \text{ V} = -1.23 \text{ V}$$

When a battery with a potential of several volts is connected to an electrolysis cell containing pure water, no reaction occurs because the concentration of ions in pure water is too low to conduct any significant electrical current. When an electrolyte such as Na_2SO_4 is added to the water, however, electrolysis occurs readily.

In any aqueous solution in which electrolysis is to take place, the electrolysis of water is also possible. For example, consider the electrolysis of a sodium iodide solution, shown in **Figure 19.20** ▼. For the electrolysis of *molten* NaI , we can readily predict that I^- is oxidized at the anode and that Na^+ is reduced at the cathode. In an aqueous solution, however, two different oxidation half-reactions are possible at the anode: the oxidation of I^- and the oxidation of water.



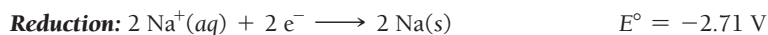
Electrolysis of an Aqueous Salt Solution



In this cell, I^- is oxidized at the anode and H_2O is reduced to H_2 at the cathode. Sodium ions are not reduced, because their electrode potential is more negative than the electrode potential of water.

► **FIGURE 19.20** Electrolysis of Aqueous NaI

Similarly, two different reduction half-reactions are possible at the cathode: the reduction of Na^+ and the reduction of water.

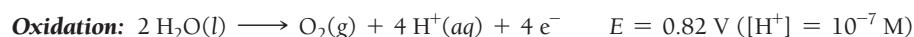
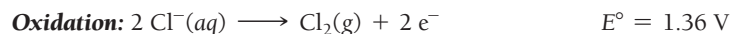


How do we know which reactions actually occur? In both cases, the answer is the same: *the half-reaction that occurs more easily*. For oxidation, the half-reaction with the more negative electrode potential is the easier one from which to extract electrons. In this case, therefore, the iodide ion is oxidized at the anode. For reduction, the half-reaction with the more positive electrode potential is the easier one to get to accept electrons. In this case, therefore, water is reduced at the cathode. Notice that Na^+ cannot be reduced in an aqueous solution—water is reduced before Na^+ . We can make the following generalization:

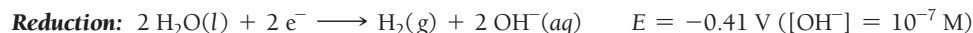
- The cations of active metals—those that are not easily reduced, such as Li^+ , K^+ , Na^+ , Mg^{2+} , Ca^{2+} , and Al^{3+} —cannot be reduced from aqueous solutions by electrolysis because water is reduced at a lower voltage.

The Electrolysis of Aqueous Sodium Chloride and Overvoltage An additional complication that we must consider when predicting the products of electrolysis is *overvoltage*—an additional voltage that must be applied in order to get some nonspontaneous reactions to occur.

We can demonstrate this concept by considering the electrolysis of a sodium chloride solution, shown in **Figure 19.21**. In order to predict the product of the electrolysis, we consider the two possible oxidation half-reactions:

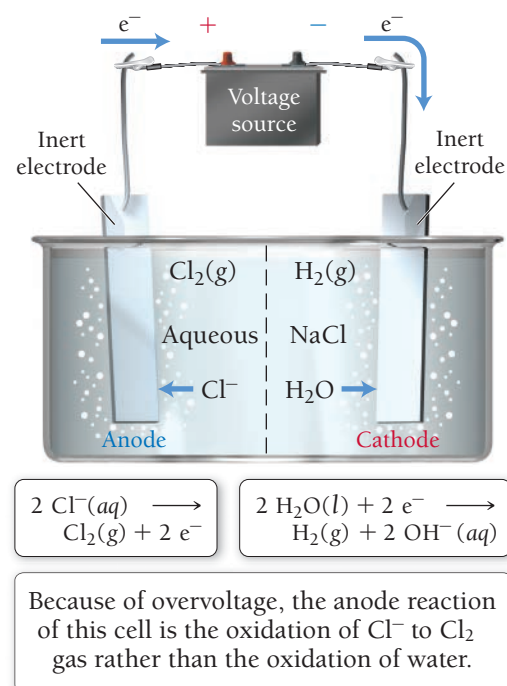


and the two possible reduction half-reactions:



Since the oxidation of water has a more negative electrode potential than the oxidation of Cl^- , we would initially predict that it would be easier to remove electrons from water, and thus water should be oxidized at the anode. Similarly, since the reduction of water has a more positive electrode potential than the reduction of Na^+ , we would expect that it would be easier to get water to accept electrons, so water should be reduced at the cathode. In other words, we initially predict that a sodium chloride solution would result in the electrolysis of water, producing oxygen gas at the anode and hydrogen gas at the cathode. If we construct such a cell, however, we find that, although hydrogen gas is indeed formed at the cathode (as predicted), oxygen gas is *not* formed at the anode—chlorine gas is formed instead. Why?

The answer is that even though the electrode potential for the oxidation of water is 0.82 V, the reaction actually requires a voltage greater than 0.82 V in order to occur. (The reasons for this behavior are related to kinetic factors that are beyond the scope of our current discussion.) This additional voltage, the *overvoltage*, increases the voltage required for the oxidation of water to about 1.4 V. The result is that the chloride ion oxidizes more easily than water and $\text{Cl}_2(\text{g})$ forms at the anode.



▲ FIGURE 19.21 Electrolysis of Aqueous NaCl: The Effect of Overvoltage

EXAMPLE 19.9

Predicting the Products of Electrolysis Reactions

Predict the half-reaction occurring at the anode and the cathode for electrolysis for each reaction.

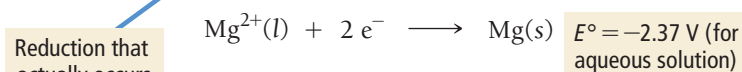
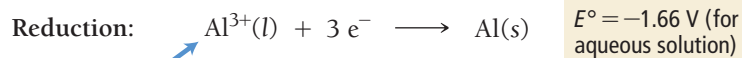
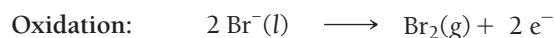
- a mixture of molten AlBr_3 and MgBr_2
- an aqueous solution of LiI

SOLUTION

- In the electrolysis of a molten salt, the anion is oxidized and the cation is reduced. However, this mixture contains two cations. Start by writing the possible oxidation and reduction half-reactions that might occur.

Since Br^- is the only anion, write the equation for its oxidation, which occurs at the anode.

At the cathode, both the reduction of Al^{3+} and the reduction of Mg^{2+} are possible. The one that actually occurs is the one that occurs more easily. Since the reduction of Al^{3+} has a more positive electrode potential in aqueous solution, this ion is more easily reduced. Therefore, the reduction of Al^{3+} occurs at the cathode.



Reduction that actually occurs (more positive potential)

—Continued on the next page

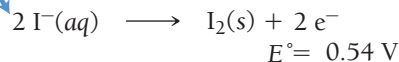
Continued from the previous page—

- (b) Because LiI is in an aqueous solution, two different oxidation half-reactions are possible at the anode, the oxidation of I^- and the oxidation of water. Write half-reactions for each, including the electrode potential. Remember to use the electrode potential of water under conditions in which $[\text{H}^+] = 10^{-7} \text{ M}$. Since the oxidation of I^- has the more negative electrode potential, it will be the half-reaction to occur at the anode.

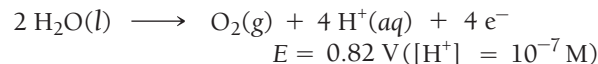
Similarly, write half-reactions for the two possible reduction half-reactions that might occur at the cathode: the reduction of Li^+ and the reduction of water. Since the reduction of water has the more positive electrode potential (even when considering overvoltage, which would raise the necessary voltage by about $0.4 - 0.6 \text{ V}$), it is the half-reaction that occurs at the cathode.

Oxidation that actually occurs
(more negative potential)

Oxidation:



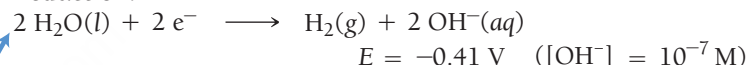
Oxidation:



Reduction:



Reduction:



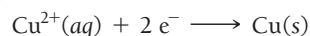
Reduction that actually occurs
(more positive potential)

FOR PRACTICE 19.9

Predict the half-reactions occurring at the anode and the cathode for the electrolysis of aqueous Na_2SO_4 .

Stoichiometry of Electrolysis

In an electrolytic cell, electrical current drives a particular chemical reaction. In a sense, the electrons act as a reactant and therefore have a stoichiometric relationship with the other reactants and products. Unlike ordinary reactants, for which we usually measure quantity as mass, for electrons we measure quantity as charge. For example, consider an electrolytic cell used to coat copper onto metals, as shown in **Figure 19.22**. The half-reaction by which copper is deposited onto the metal is:



For every 2 mol of electrons that flow through the cell, 1 mol of solid copper is plated. We can write the stoichiometric relationship:



We can determine the number of moles of electrons that flow in a given electrolytic cell by measuring the total charge that flows through the cell, which in turn depends on the *magnitude* of the current and on the *time* that the current runs. Recall from Section 19.3 that the unit of current is the ampere.

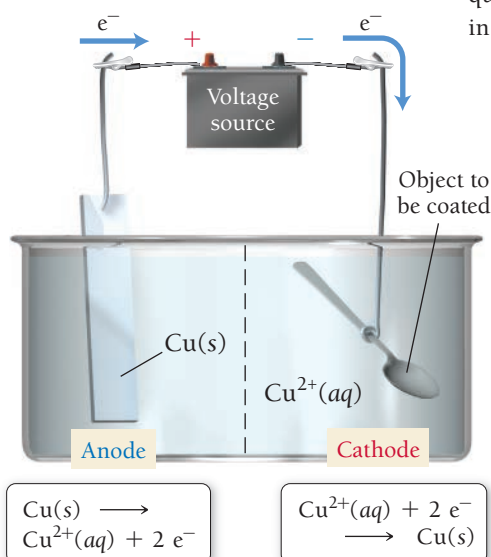
$$1 \text{ A} = 1 \frac{\text{C}}{\text{s}}$$

If we multiply the amount of current (in A) flowing through the cell by the time (in s) that the current flowed, we find the total charge that passed through the cell in that time:

$$\text{Current} \left(\frac{\text{C}}{\text{s}} \right) \times \text{time}(\text{s}) = \text{charge}(\text{C})$$

The relationship between charge and the number of moles of electrons is given by Faraday's constant, which, as we saw previously, corresponds to the charge in coulombs of 1 mol of electrons.

$$F = \frac{96,485 \text{ C}}{\text{mol e}^-}$$



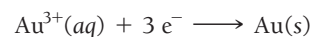
▲ FIGURE 19.22 Electrolytic Cell for Copper Plating In this cell, copper ions are plated onto other metals. It takes two moles of electrons to plate one mole of copper atoms.

We can use these relationships to solve problems involving the stoichiometry of electrolytic cells, as demonstrated in Example 19.10.

EXAMPLE 19.10

Stoichiometry of Electrolysis

Gold can be plated out of a solution containing Au^{3+} according to the half-reaction:



What mass of gold (in grams) is plated by a 25-minute flow of 5.5 A current?

SORT You are given the half-reaction for the plating of gold, which shows the stoichiometric relationship between moles of electrons and moles of gold. You are also given the current and duration. You must find the mass of gold that is deposited in that time.

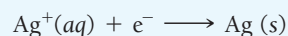
STRATEGIZE You need to find the amount of gold, which is related stoichiometrically to the number of electrons that have flowed through the cell. Begin with time in minutes and convert to seconds. Then, since current is a measure of charge per unit time, use the given current and the time to find the number of coulombs. You can use Faraday's constant to calculate the number of moles of electrons and the stoichiometry of the reaction to find the number of moles of gold. Finally, use the molar mass of gold to convert to mass of gold.

SOLVE Follow the conceptual plan to solve the problem, canceling units to arrive at the mass of gold.

CHECK The answer has the correct units (g Au). The magnitude of the answer is reasonable if you consider that 10 amps of current for 1 hour is the equivalent of about $1/3$ mol of electrons (check for yourself), which would produce $1/9$ mol (or about 20 g) of gold.

FOR PRACTICE 19.10

Silver can be plated out of a solution containing Ag^{+} according to the half-reaction:



How much time (in minutes) does it take to plate 12 g of silver using a current of 3.0 A?

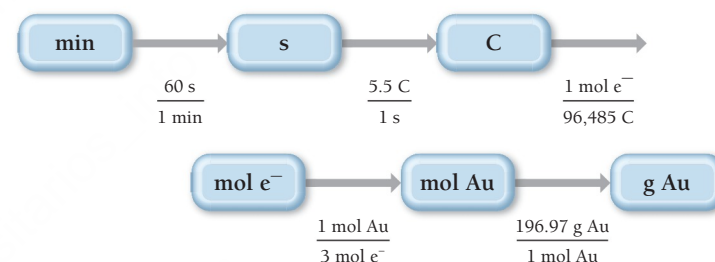
GIVEN: 3 mol e^{-} : 1 mol Au

5.5 amps

25 min

FIND: g Au

CONCEPTUAL PLAN

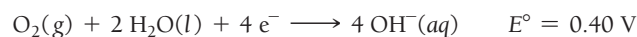


SOLUTION

$$25 \text{ min} \times \frac{60 \text{ s}}{1 \text{ min}} \times \frac{5.5 \text{ C}}{1 \text{ s}} \times \frac{1 \text{ mol e}^{-}}{96,485 \text{ C}} \times \frac{1 \text{ mol Au}}{3 \text{ mol e}^{-}} \times \frac{196.97 \text{ g Au}}{1 \text{ mol Au}} = 5.6 \text{ g Au}$$

19.9 Corrosion: Undesirable Redox Reactions

Corrosion is the (usually) gradual, nearly always undesired, oxidation of metals that are exposed to oxidizing agents in the environment. From Table 19.1, we can see that the reduction of oxygen in the presence of water has an electrode potential of 0.40 V.



In the presence of acid, the reduction of oxygen has an even more positive electrode potential of 1.23 V.



The reduction of oxygen, therefore, has a strong tendency to occur and can bring about the oxidation of other substances, especially metals. Notice that the half-reactions for the reduction of most metal ions



▲ A metal must usually be reduced to extract it from its ore. In corrosion, the metal is oxidized back to its more natural state.

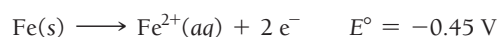


▲ Aluminum is stable because its oxide forms a protective film over the underlying metal, preventing further oxidation.

are listed *below* the half-reactions for the reduction of oxygen in Table 19.1. Consequently, the oxidation (or corrosion) of those metals is spontaneous when paired with the reduction of oxygen. Corrosion is the opposite of the process by which metals are extracted from their ores. In extraction, the free metal is reduced out from its ore. In corrosion, the metal is oxidized.

Given the ease with which metals oxidize in the presence of oxygen, acid, and water, why are metals used so frequently as building materials in the first place? Many metals form oxides that coat the surface of the metal and prevent further corrosion. For example, bare aluminum metal, with an electrode potential of -1.66 V, is quickly oxidized in the presence of oxygen. However, the oxide that forms at the surface of aluminum is Al_2O_3 . In its crystalline form, Al_2O_3 is *corundum*, a highly inert and structurally solid substance. The Al_2O_3 coating acts to protect the underlying aluminum metal, preventing further corrosion.

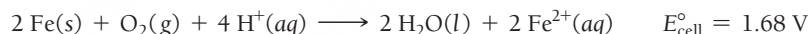
The oxides of iron, however, are not structurally stable, and they tend to flake away from the underlying metal, exposing it to further corrosion. A significant part of the iron produced each year is used to replace rusted iron. Rusting is a redox reaction in which iron is oxidized according to the following half-reaction:



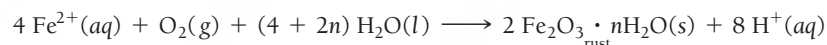
This oxidation reaction tends to occur at defects on the surface of the iron—known as *anodic regions* because oxidation is occurring at these locations—as shown in **Figure 19.23** ▼. The electrons produced at the anodic region travel through the metal to areas called *cathodic regions* where they react with oxygen and H^+ ions dissolved in moisture. (The H^+ ions come from carbonic acid, which naturally forms in water from carbon dioxide in air.)



The overall reaction has a cell potential of 1.68 V and is highly spontaneous.



The Fe^{2+} ions formed in the anodic regions can migrate through moisture on the surface of the iron to cathodic regions, where they are further oxidized by reaction with more oxygen.

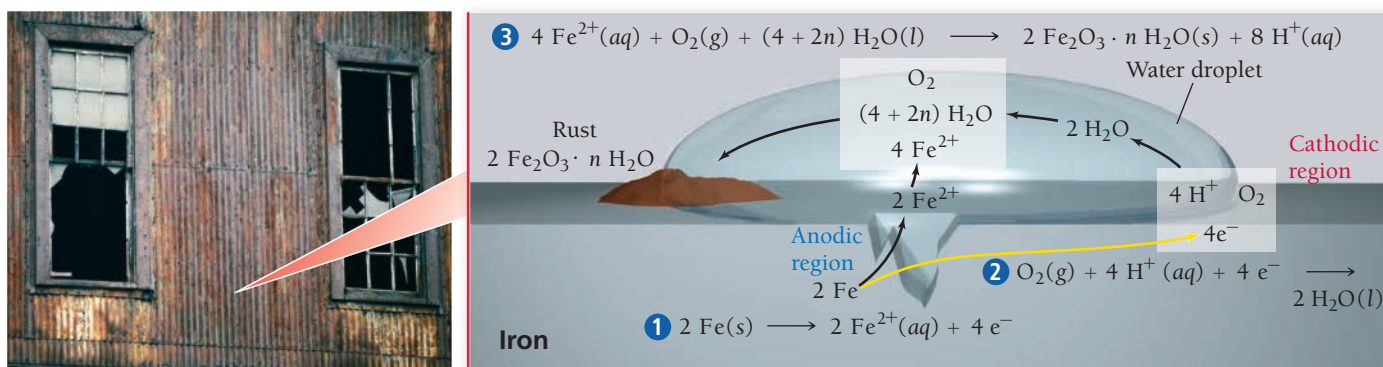


Rust is a hydrated form of iron(III) oxide whose exact composition depends on the conditions under which it forms. Consider each of the following important components in the formation of rust:

- *Moisture must be present for rusting to occur.* The presence of water is necessary because water is a reactant in the last reaction and because charge (either electrons or ions) must be free to flow between the anodic and cathodic regions.
- *Additional electrolytes promote rusting.* The presence of an electrolyte (such as sodium chloride) on the surface of iron promotes rusting because it enhances current flow. This is why cars rust so quickly in cold climates where roads are salted and in coastal areas where saltwater mist is present.
- *The presence of acids promotes rusting.* Since H^+ ions are involved in the reduction of oxygen, lower pH enhances the cathodic reaction and leads to faster rusting.

▼ **FIGURE 19.23 Corrosion of Iron: Rusting** The oxidation of iron occurs at anodic regions on the metal surface. The iron ions migrate to cathodic regions, where they react with oxygen and water to form rust.

The Rusting of Iron

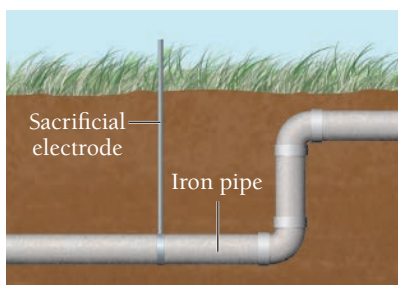


Preventing the rusting of iron is a major industry. The most obvious way to prevent it is to keep iron dry. Without water, the redox reaction cannot occur. Another way to prevent rust is to coat iron with a substance that is impervious to water. Cars, for example, are painted and sealed to prevent rust. A scratch in the paint, however, can lead to rusting of the underlying iron.

Rust can also be prevented by placing a *sacrificial electrode* in electrical contact with the iron. The sacrificial electrode must be composed of a metal that oxidizes more easily than iron (that is, it must be below iron in Table 19.1). The sacrificial electrode oxidizes in place of the iron (just as the more easily oxidizable species in a mixture is the one to oxidize), protecting the iron from oxidation. A related way to protect iron from rusting is to coat it with a metal that oxidizes more easily than iron. Galvanized nails, for example, are coated with a thin layer of zinc. Since zinc has a more negative electrode potential than iron, it will oxidize in place of the underlying iron (just as a sacrificial electrode does). The oxide of zinc remains on the nail as a protective coating.



▲ A scratch in paint often allows the underlying iron to rust.



▲ If a metal more active than iron, such as magnesium or aluminum, is in electrical contact with iron, the metal rather than the iron will be oxidized. This principle underlies the use of sacrificial electrodes to prevent the corrosion of iron.



◀ In galvanized nails, a layer of zinc prevents the underlying iron from rusting. The zinc oxidizes in place of the iron, forming a protective layer of zinc oxide.

Sacrificial Electrodes

Which of these metals does not act as a sacrificial electrode for iron?

Zn, Mg, Mn, Cu

19.8

Cc

Conceptual
Connection



SELF-ASSESSMENT

QUIZ



- Balance the redox reaction equation (occurring in acidic solution) and choose the correct coefficients for each reactant and product.

$$_\text{VO}_2^+(aq) + _\text{Sn}(s) + _\text{H}^+(aq) \longrightarrow _\text{VO}^{2+}(aq) + _\text{Sn}^{2+}(aq) + _\text{H}_2\text{O}(l)$$
 - 2,1,4 \longrightarrow 2,1,2
 - 1,1,2 \longrightarrow 1,1,1
 - 2,1,2 \longrightarrow 2,1,1
 - 2,1,2 \longrightarrow 2,1,2
- Which statement is true for voltaic cells?
 - Electrons flow from the anode to the cathode.
 - Electrons flow from the more negatively charged electrode to the more positively charged electrode.
 - Electrons flow from higher potential energy to lower potential energy.
 - All of the above.

CHAPTER SUMMARY 19

REVIEW

MasteringChemistry™ provides end-of-chapter exercises, feedback-enriched tutorial problems, animations, and interactive activities to encourage problem solving practice and deeper understanding of key concepts and topics.

KEY LEARNING OUTCOMES

CHAPTER OBJECTIVES	ASSESSMENT
Use the Half-Reaction Method of Balancing Aqueous Redox Equations in Acidic Solution (19.2)	• Examples 19.1, 19.2 For Practice 19.1, 19.2 Exercises 33–36
Balance Redox Reactions Occurring in Basic Solution (19.2)	• Example 19.3 For Practice 19.3 Exercises 37, 38
Calculate Standard Potentials for Electrochemical Cells from Standard Electrode Potentials of the Half-Reactions (19.4)	• Example 19.4 For Practice 19.4 Exercises 41, 42, 57, 58
Predict Spontaneous Redox Reactions and Sketching Electrochemical Cells (19.4)	• Example 19.5 For Practice 19.5 Exercises 39, 40, 43, 44, 47–50
Relate ΔG° and E°_{cell} (19.5)	• Example 19.6 For Practice 19.6 Exercises 61, 62
Relate E°_{cell} and K (19.5)	• Example 19.7 For Practice 19.7 Exercises 63–68
Calculate E_{cell} under Nonstandard Conditions (19.6)	• Example 19.8 For Practice 19.8 Exercises 69–74
Predict the Products of Electrolysis Reactions (19.8)	• Example 19.9 For Practice 19.9 Exercises 87–92
Use Stoichiometry to Calculate the Quantity of Reactants Consumed or Products Produced in an Electrolytic Cell (19.8)	• Example 19.10 For Practice 19.10 Exercises 95–98

KEY TERMS

Section 19.3

electrical current (849)
 electrochemical cell (849)
 voltaic (galvanic) cell (849)
 electrolytic cell (849)
 half-cell (850)
 electrode (850)
 ampere (A) (851)
 potential difference (851)
 volt (V) (851)
 electromotive force (emf) (851)
 cell potential (cell emf) (E_{cell}) (851)

standard cell potential (standard emf) (E°_{cell}) (852)
 anode (852)
 cathode (852)
 salt bridge (852)

Section 19.4

standard electrode potential (854)
 standard hydrogen electrode (SHE) (854)

Section 19.5

Faraday's constant (F) (862)

Section 19.6

Nernst equation (866)

Section 19.7

dry-cell battery (870)
 alkaline battery (870)
 lead–acid storage battery (870)
 nickel–cadmium (NiCad) battery (871)
 nickel–metal hydride (NiMH) battery (871)
 lithium ion battery (871)
 fuel cell (872)

Section 19.8

electrolysis (872)

Section 19.9

corrosion (879)

KEY CONCEPTS

Lightning and Batteries (19.1)

- Lightning is the massive flow of electrons from the base of a thundercloud (which is negatively charged) to the ground (which is positively charged).
- In a battery, electrons flow from the negatively charged end to the positively charged end.

Balancing Oxidation–Reduction Equations (19.2)

- Oxidation is the loss of electrons and corresponds to an increase in oxidation state; reduction is the gain of electrons and corresponds to a decrease in oxidation state.
- We can balance redox reactions using the half-reaction method, in which the oxidation and reduction reactions are balanced separately and then added. This method differs slightly for redox reactions in acidic and in basic solutions.

Voltaic (or Galvanic) Cells: Generating Electricity from Spontaneous Chemical Reactions (19.3)

- A voltaic electrochemical cell separates the reactants of a spontaneous redox reaction into two half-cells that are connected by a wire and a means to exchange ions so that electricity is generated.
- In an electrochemical cell, the electrode where oxidation occurs is the anode and the electrode where reduction occurs is the cathode; electrons flow from the anode to the cathode.
- The rate of electrons flowing through a wire is measured in amperes (A), and the cell potential is measured in volts (V).
- A salt bridge allows ions to flow between the half-cell solutions and prevents the buildup of charge.
- Cell diagram or line notation is a technique for symbolizing electrochemical cells concisely by separating the components of the reaction using lines or commas.

Standard Electrode Potentials (19.4)

- The electrode potentials of half-cells are measured in relation to that of a standard hydrogen electrode, which is assigned an electrode potential of zero under standard conditions (solution concentrations of 1 M, gas pressures of 1 atm, and 25°C).
- A species with a highly positive E° has a strong tendency to attract electrons and undergo reduction (and is therefore an excellent oxidizing agent).
- A species with a highly negative E° has a strong tendency to repel electrons and undergo oxidation (and is therefore an excellent reducing agent).

Cell Potential, Free Energy, and the Equilibrium Constant (19.5)

- In a spontaneous reaction, E°_{cell} is positive, the change in free energy (ΔG°) is negative, and the equilibrium constant (K) is greater than 1.
- In a nonspontaneous reaction, E°_{cell} is negative, ΔG° is positive, and K is less than 1.
- Because E°_{cell} , ΔG° , and K all relate to spontaneity, we can derive equations relating all three quantities.

Cell Potential and Concentration (19.6)

- The standard cell potential (E°_{cell}) is related to the cell potential (E_{cell}) by the Nernst equation, $E_{\text{cell}} = E^\circ_{\text{cell}} - (0.0592 \text{ V}/n) \log Q$.

- As shown by the Nernst equation, E_{cell} is related to the reaction quotient (Q); E_{cell} equals zero when Q equals K .
- In a concentration cell, the reactions at both electrodes are identical and electrons flow because of a difference in concentration.

Batteries: Using Chemistry to Generate Electricity (19.7)

- Batteries are packaged voltaic cells.
- Dry-cell batteries, including alkaline batteries, do not contain large amounts of water.
- The reactions in rechargeable batteries, such as lead–acid storage, nickel–cadmium, nickel–metal hydride, and lithium ion batteries, can be reversed.
- Fuel cells are similar to batteries except that fuel-cell reactants must be continually replenished from an external source.

Electrolysis: Driving Nonspontaneous Chemical Reactions with Electricity (19.8)

- An electrolytic electrochemical cell differs from a voltaic cell in that (1) an electrical charge is used to drive the reaction, and (2) although the anode is still the site of oxidation and the cathode the site of reduction, they are represented with signs opposite those of a voltaic cell (anode +, cathode –).
- In electrolysis reactions, the anion is oxidized; if there is more than one anion, the anion with the more negative E° is oxidized.
- We can use stoichiometry to calculate the quantity of reactants consumed or products produced in an electrolytic cell.

Corrosion: Undesirable Redox Reactions (19.9)

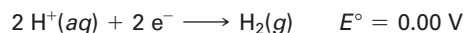
- Corrosion is the undesired oxidation of metal by environmental oxidizing agents.
- When some metals such as aluminum oxidize, they form a stable compound that prevents further oxidation. Iron, however, does not form a structurally stable compound when oxidized and therefore rust flakes off and exposes more iron to corrosion.
- Iron corrosion can be prevented by preventing water contact, minimizing the presence of electrolytes and acids, or using a sacrificial electrode.

KEY EQUATIONS AND RELATIONSHIPS**Definition of an Ampere (19.3)**

$$1 \text{ A} = 1 \text{ C/s}$$

Definition of a Volt (19.3)

$$1 \text{ V} = 1 \text{ J/C}$$

Standard Hydrogen Electrode (19.4)**Equation for Cell Potential (19.4)**

$$E^\circ_{\text{cell}} = E^\circ_{\text{cathode}} - E^\circ_{\text{anode}}$$

Relating ΔG° and E°_{cell} (19.5)

$$\Delta G^\circ = -nFE^\circ_{\text{cell}} \quad F = \frac{96,485 \text{ C}}{\text{mol e}^-}$$

Relating E°_{cell} and K (19.5)

$$E^\circ = \frac{0.0592 \text{ V}}{n} \log K \text{ (at } 25^\circ\text{C)}$$

The Nernst Equation (19.6)

$$E_{\text{cell}} = E^\circ_{\text{cell}} - \frac{0.0592 \text{ V}}{n} \log Q \text{ (at } 25^\circ\text{C)}$$

EXERCISES

REVIEW QUESTIONS

1. Define oxidation and reduction and explain the basic procedure for balancing redox reactions.
2. Explain the difference between a voltaic (or galvanic) electrochemical cell and an electrolytic one.
3. Which reaction (oxidation or reduction) occurs at the anode of a voltaic cell? What is the sign of the anode? Do electrons flow toward or away from the anode?
4. Which reaction (oxidation or reduction) occurs at the cathode of a voltaic cell? What is the sign of the cathode? Do electrons flow toward or away from the cathode?
5. Explain the purpose of a salt bridge in an electrochemical cell.
6. Which unit is used to measure the magnitude of electrical current? Which unit is used to measure the magnitude of a potential difference? Explain how electrical current and potential difference differ.
7. What is the definition of the standard cell potential (E_{cell}°)? What does a large positive standard cell potential imply about the spontaneity of the redox reaction occurring in the cell? What does a negative standard cell potential imply about the reaction?
8. Describe the basic features of a cell diagram (or line notation) for an electrochemical cell.
9. Why do some electrochemical cells employ inert electrodes such as platinum?
10. Describe the standard hydrogen electrode (SHE) and explain its use in determining standard electrode potentials.
11. How is the cell potential of an electrochemical cell (E_{cell}°) related to the potentials of the half-cells?
12. Does a large positive electrode potential indicate a strong oxidizing agent or a strong reducing agent? What about a large negative electrode potential?
13. Is a spontaneous redox reaction obtained by pairing any reduction half-reaction with one listed above it or with one listed below it in Table 19.1?
14. How can Table 19.1 be used to predict whether or not a metal will dissolve in HCl? In HNO_3 ?
15. Explain why E_{cell}° , $\Delta G_{\text{rxn}}^{\circ}$, and K are all interrelated.
16. Does a redox reaction with a small equilibrium constant ($K < 1$) have a positive or a negative E_{cell}° ? Does it have a positive or a negative $\Delta G_{\text{rxn}}^{\circ}$?
17. How does E_{cell} depend on the concentrations of the reactants and products in the redox reaction occurring in the cell? What effect does increasing the concentration of a reactant have on E_{cell} ? Increasing the concentration of a product?
18. Use the Nernst equation to show that $E_{\text{cell}} = E_{\text{cell}}^{\circ}$ under standard conditions.
19. What is a concentration electrochemical cell?
20. What are the anode and cathode reactions in a common dry-cell battery? In an alkaline battery?
21. What are the anode and cathode reactions in a lead–acid storage battery? What happens when the battery is recharged?
22. What are the three common types of portable rechargeable batteries, and how does each one work?
23. What is a fuel cell? What is the most common type of fuel cell, and what reactions occur at its anode and cathode?
24. The anode of an electrolytic cell must be connected to which terminal—positive or negative—of the power source?
25. What species is oxidized, and what species is reduced in the electrolysis of a pure molten salt?
26. If an electrolytic cell contains a mixture of species that can be oxidized, how do you determine which species will actually be oxidized? If it contains a mixture of species that can be reduced, how do you determine which one will actually be reduced?
27. Why does the electrolysis of an aqueous sodium chloride solution produce hydrogen gas at the cathode?
28. What is overvoltage in an electrochemical cell? Why is it important?
29. How is the amount of current flowing through an electrolytic cell related to the amount of product produced in the redox reaction?
30. What is corrosion? Why is corrosion only a problem for some metals (such as iron)?
31. Explain the role of each of the following in promoting corrosion: moisture, electrolytes, and acids.
32. How can the corrosion of iron be prevented?

PROBLEMS BY TOPIC

Note: Answers to all odd-numbered Problems, numbered in blue, can be found in Appendix III. Exercises in the Problems by Topic section are paired, with each odd-numbered problem followed by a similar even-numbered problem. Exercises in the Cumulative Problems section are also paired but more loosely. Because of their nature, Challenge Problems and Conceptual Problems are unpaired.

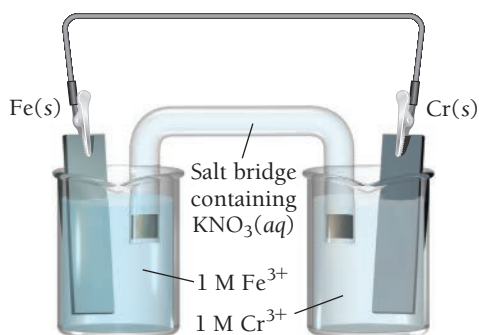
Balancing Redox Reactions

33. Balance each redox reaction occurring in acidic aqueous solution.
 - a. $\text{K(s)} + \text{Cr}^{3+}(\text{aq}) \longrightarrow \text{Cr(s)} + \text{K}^{+}(\text{aq})$
 - b. $\text{Al(s)} + \text{Fe}^{2+}(\text{aq}) \longrightarrow \text{Al}^{3+}(\text{aq}) + \text{Fe(s)}$
 - c. $\text{BrO}_3^{-}(\text{aq}) + \text{N}_2\text{H}_4(\text{g}) \longrightarrow \text{Br}^{-}(\text{aq}) + \text{N}_2(\text{g})$
34. Balance each redox reaction occurring in acidic aqueous solution.
 - a. $\text{Zn(s)} + \text{Sn}^{2+}(\text{aq}) \longrightarrow \text{Zn}^{2+}(\text{aq}) + \text{Sn(s)}$
 - b. $\text{Mg(s)} + \text{Cr}^{3+}(\text{aq}) \longrightarrow \text{Mg}^{2+}(\text{aq}) + \text{Cr(s)}$
 - c. $\text{MnO}_4^{-}(\text{aq}) + \text{Al(s)} \longrightarrow \text{Mn}^{2+}(\text{aq}) + \text{Al}^{3+}(\text{aq})$
35. Balance each redox reaction occurring in acidic aqueous solution.
 - a. $\text{PbO}_2(\text{s}) + \text{I}^{-}(\text{aq}) \longrightarrow \text{Pb}^{2+}(\text{aq}) + \text{I}_2(\text{s})$
 - b. $\text{SO}_3^{2-}(\text{aq}) + \text{MnO}_4^{-}(\text{aq}) \longrightarrow \text{SO}_4^{2-}(\text{aq}) + \text{Mn}^{2+}(\text{aq})$
 - c. $\text{S}_2\text{O}_3^{2-}(\text{aq}) + \text{Cl}_2(\text{g}) \longrightarrow \text{SO}_4^{2-}(\text{aq}) + \text{Cl}^{-}(\text{aq})$

36. Balance each redox reaction occurring in acidic aqueous solution.
- $\text{I}^-(\text{aq}) + \text{NO}_2^-(\text{aq}) \longrightarrow \text{I}_2(\text{s}) + \text{NO}(\text{g})$
 - $\text{ClO}_4^-(\text{aq}) + \text{Cl}^-(\text{aq}) \longrightarrow \text{ClO}_3^-(\text{aq}) + \text{Cl}_2(\text{g})$
 - $\text{NO}_3^-(\text{aq}) + \text{Sn}^{2+}(\text{aq}) \longrightarrow \text{Sn}^{4+}(\text{aq}) + \text{NO}(\text{g})$
37. Balance each redox reaction occurring in basic aqueous solution.
- $\text{H}_2\text{O}_2(\text{aq}) + \text{ClO}_2(\text{aq}) \longrightarrow \text{ClO}_2^-(\text{aq}) + \text{O}_2(\text{g})$
 - $\text{Al}(\text{s}) + \text{MnO}_4^-(\text{aq}) \longrightarrow \text{MnO}_2(\text{s}) + \text{Al}(\text{OH})_4^-(\text{aq})$
 - $\text{Cl}_2(\text{g}) \longrightarrow \text{Cl}^-(\text{aq}) + \text{ClO}^-(\text{aq})$
38. Balance each redox reaction occurring in basic aqueous solution.
- $\text{MnO}_4^-(\text{aq}) + \text{Br}^-(\text{aq}) \longrightarrow \text{MnO}_2(\text{s}) + \text{BrO}_3^-(\text{aq})$
 - $\text{Ag}(\text{s}) + \text{CN}^-(\text{aq}) + \text{O}_2(\text{g}) \longrightarrow \text{Ag}(\text{CN})_2^-(\text{aq})$
 - $\text{NO}_2^-(\text{aq}) + \text{Al}(\text{s}) \longrightarrow \text{NH}_3(\text{g}) + \text{AlO}_2^-(\text{aq})$

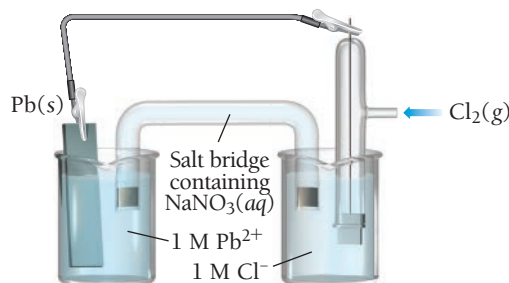
Voltaic Cells, Standard Cell Potentials, and Direction of Spontaneity

39. Sketch a voltaic cell for each redox reaction. Label the anode and cathode and indicate the half-reaction that occurs at each electrode and the species present in each solution. Also indicate the direction of electron flow.
- $2 \text{Ag}^+(\text{aq}) + \text{Pb}(\text{s}) \longrightarrow 2 \text{Ag}(\text{s}) + \text{Pb}^{2+}(\text{aq})$
 - $2 \text{ClO}_2(\text{g}) + 2 \text{I}^-(\text{aq}) \longrightarrow 2 \text{ClO}_2^-(\text{aq}) + \text{I}_2(\text{s})$
 - $\text{O}_2(\text{g}) + 4 \text{H}^+(\text{aq}) + 2 \text{Zn}(\text{s}) \longrightarrow 2 \text{H}_2\text{O}(\text{l}) + 2 \text{Zn}^{2+}(\text{aq})$
40. Sketch a voltaic cell for each redox reaction. Label the anode and cathode and indicate the half-reaction that occurs at each electrode and the species present in each solution. Also indicate the direction of electron flow.
- $\text{Ni}^{2+}(\text{aq}) + \text{Mg}(\text{s}) \longrightarrow \text{Ni}(\text{s}) + \text{Mg}^{2+}(\text{aq})$
 - $2 \text{H}^+(\text{aq}) + \text{Fe}(\text{s}) \longrightarrow \text{H}_2(\text{g}) + \text{Fe}^{2+}(\text{aq})$
 - $2 \text{NO}_3^-(\text{aq}) + 8 \text{H}^+(\text{aq}) + 3 \text{Cu}(\text{s}) \longrightarrow 2 \text{NO}(\text{g}) + 4 \text{H}_2\text{O}(\text{l}) + 3 \text{Cu}^{2+}(\text{aq})$
41. Calculate the standard cell potential for each of the electrochemical cells in Problem 39.
42. Calculate the standard cell potential for each of the electrochemical cells in Problem 40.
43. Consider the voltaic cell:



- Determine the direction of electron flow and label the anode and the cathode.
- Write a balanced equation for the overall reaction and calculate E_{cell}° .
- Label each electrode as negative or positive.
- Indicate the direction of anion and cation flow in the salt bridge.

44. Consider the voltaic cell:



- Determine the direction of electron flow and label the anode and the cathode.
 - Write a balanced equation for the overall reaction and calculate E_{cell}° .
 - Label each electrode as negative or positive.
 - Indicate the direction of anion and cation flow in the salt bridge.
45. Use line notation to represent each electrochemical cell in Problem 39.
46. Use line notation to represent each electrochemical cell in Problem 40.
47. Make a sketch of the voltaic cell represented by the line notation. Write the overall balanced equation for the reaction and calculate E_{cell}° .
- $$\text{Sn}(\text{s}) | \text{Sn}^{2+}(\text{aq}) || \text{NO}(\text{g}) | \text{NO}_3^-(\text{aq}), \text{H}^+(\text{aq}) | \text{Pt}(\text{s})$$
48. Make a sketch of the voltaic cell represented by the line notation. Write the overall balanced equation for the reaction and calculate E_{cell}° .
- $$\text{Mn}(\text{s}) | \text{Mn}^{2+}(\text{aq}) || \text{ClO}_2^-(\text{aq}) | \text{ClO}_2(\text{g}) | \text{Pt}(\text{s})$$
49. Determine whether or not each redox reaction occurs spontaneously in the forward direction.
- $\text{Ni}(\text{s}) + \text{Zn}^{2+}(\text{aq}) \longrightarrow \text{Ni}^{2+}(\text{aq}) + \text{Zn}(\text{s})$
 - $\text{Ni}(\text{s}) + \text{Pb}^{2+}(\text{aq}) \longrightarrow \text{Ni}^{2+}(\text{aq}) + \text{Pb}(\text{s})$
 - $\text{Al}(\text{s}) + 3 \text{Ag}^+(\text{aq}) \longrightarrow \text{Al}^{3+}(\text{aq}) + 3 \text{Ag}(\text{s})$
 - $\text{Pb}(\text{s}) + \text{Mn}^{2+}(\text{aq}) \longrightarrow \text{Pb}^{2+}(\text{aq}) + \text{Mn}(\text{s})$
50. Determine whether each redox reaction occurs spontaneously in the forward direction.
- $\text{Ca}^{2+}(\text{aq}) + \text{Zn}(\text{s}) \longrightarrow \text{Ca}(\text{s}) + \text{Zn}^{2+}(\text{aq})$
 - $2 \text{Ag}^+(\text{aq}) + \text{Ni}(\text{s}) \longrightarrow 2 \text{Ag}(\text{s}) + \text{Ni}^{2+}(\text{aq})$
 - $\text{Fe}(\text{s}) + \text{Mn}^{2+}(\text{aq}) \longrightarrow \text{Fe}^{2+}(\text{aq}) + \text{Mn}(\text{s})$
 - $2 \text{Al}(\text{s}) + 3 \text{Pb}^{2+}(\text{aq}) \longrightarrow 2 \text{Al}^{3+}(\text{aq}) + 3 \text{Pb}(\text{s})$

- Which metal could you use to reduce Mn^{2+} ions but not Mg^{2+} ions?
- Which metal can be oxidized with an Sn^{2+} solution but not with an Fe^{2+} solution?
- Determine whether or not each metal dissolves in 1 M HCl. For those metals that dissolve, write a balanced redox reaction showing what happens when the metal dissolves.
 - Al
 - Ag
 - Pb
- Determine whether or not each metal dissolves in 1 M HCl. For those metals that dissolve, write a balanced redox reaction showing what happens when the metal dissolves.
 - Cu
 - Fe
 - Au
- Determine whether or not each metal dissolves in 1 M HNO_3 . For those metals that dissolve, write a balanced redox reaction showing what happens when the metal dissolves.
 - Cu
 - Au

56. Determine whether or not each metal dissolves in 1 M HIO_3 . For those metals that dissolve, write a balanced redox equation for the reaction that occurs.
 a. Au b. Cr
57. Calculate E_{cell}° for each balanced redox reaction and determine if the reaction is spontaneous as written.
 a. $2 \text{Cu(s)} + \text{Mn}^{2+}(\text{aq}) \longrightarrow 2 \text{Cu}^+(\text{aq}) + \text{Mn(s)}$
 b. $\text{MnO}_2(\text{s}) + 4 \text{H}^+(\text{aq}) + \text{Zn(s)} \longrightarrow \text{Mn}^{2+}(\text{aq}) + 2 \text{H}_2\text{O(l)} + \text{Zn}^{2+}(\text{aq})$
 c. $\text{Cl}_2(\text{g}) + 2 \text{F}^-(\text{aq}) \longrightarrow \text{F}_2(\text{g}) + 2 \text{Cl}^-(\text{aq})$
58. Calculate E_{cell}° for each balanced redox reaction and determine if the reaction is spontaneous as written.
 a. $\text{O}_2(\text{g}) + 2 \text{H}_2\text{O(l)} + 4 \text{Ag(s)} \longrightarrow 4 \text{OH}^-(\text{aq}) + 4 \text{Ag}^+(\text{aq})$
 b. $\text{Br}_2(\text{l}) + 2 \text{I}^-(\text{aq}) \longrightarrow 2 \text{Br}^-(\text{aq}) + \text{I}_2(\text{s})$
 c. $\text{PbO}_2(\text{s}) + 4 \text{H}^+(\text{aq}) + \text{Sn(s)} \longrightarrow \text{Pb}^{2+}(\text{aq}) + 2 \text{H}_2\text{O(l)} + \text{Sn}^{2+}(\text{aq})$
59. Which metal cation is the best oxidizing agent?
 a. Pb^{2+} b. Cr^{3+} c. Fe^{2+} d. Sn^{2+}
60. Which metal is the best reducing agent?
 a. Mn b. Al c. Ni d. Cr

Cell Potential, Free Energy, and the Equilibrium Constant

61. Use tabulated electrode potentials to calculate $\Delta G_{\text{rxn}}^\circ$ for each reaction at 25°C.
 a. $\text{Pb}^{2+}(\text{aq}) + \text{Mg(s)} \longrightarrow \text{Pb(s)} + \text{Mg}^{2+}(\text{aq})$
 b. $\text{Br}_2(\text{l}) + 2 \text{Cl}^-(\text{aq}) \longrightarrow 2 \text{Br}^-(\text{aq}) + \text{Cl}_2(\text{g})$
 c. $\text{MnO}_2(\text{s}) + 4 \text{H}^+(\text{aq}) + \text{Cu(s)} \longrightarrow \text{Mn}^{2+}(\text{aq}) + 2 \text{H}_2\text{O(l)} + \text{Cu}^{2+}(\text{aq})$
62. Use tabulated electrode potentials to calculate $\Delta G_{\text{rxn}}^\circ$ for each reaction at 25°C.
 a. $2 \text{Fe}^{3+}(\text{aq}) + 3 \text{Sn(s)} \longrightarrow 2 \text{Fe(s)} + 3 \text{Sn}^{2+}(\text{aq})$
 b. $\text{O}_2(\text{g}) + 2 \text{H}_2\text{O(l)} + 2 \text{Cu(s)} \longrightarrow 4 \text{OH}^-(\text{aq}) + 2 \text{Cu}^{2+}(\text{aq})$
 c. $\text{Br}_2(\text{l}) + 2 \text{I}^-(\text{aq}) \longrightarrow 2 \text{Br}^-(\text{aq}) + \text{I}_2(\text{s})$
63. Calculate the equilibrium constant for each of the reactions in Problem 61.
64. Calculate the equilibrium constant for each of the reactions in Problem 62.
65. Calculate the equilibrium constant for the reaction between $\text{Ni}^{2+}(\text{aq})$ and Cd(s) (at 25°C).
66. Calculate the equilibrium constant for the reaction between $\text{Fe}^{2+}(\text{aq})$ and Zn(s) (at 25°C).
67. Calculate $\Delta G_{\text{rxn}}^\circ$ and E_{cell}° for a redox reaction with $n = 2$ that has an equilibrium constant of $K = 25$ (at 25°C).
68. Calculate $\Delta G_{\text{rxn}}^\circ$ and E_{cell}° for a redox reaction with $n = 3$ that has an equilibrium constant of $K = 0.050$ (at 25°C).

Nonstandard Conditions and the Nernst Equation

69. A voltaic cell employs the following redox reaction:

$$\text{Sn}^{2+}(\text{aq}) + \text{Mn(s)} \longrightarrow \text{Sn(s)} + \text{Mn}^{2+}(\text{aq})$$

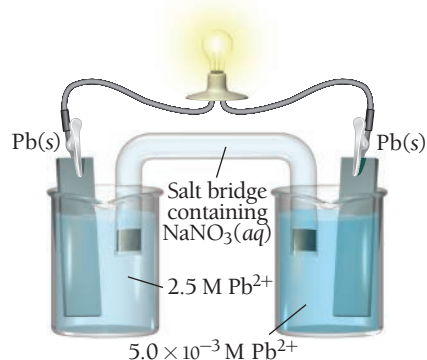
 Calculate the cell potential at 25°C under each set of conditions.
 a. standard conditions
 b. $[\text{Sn}^{2+}] = 0.0100 \text{ M}$; $[\text{Mn}^{2+}] = 2.00 \text{ M}$
 c. $[\text{Sn}^{2+}] = 2.00 \text{ M}$; $[\text{Mn}^{2+}] = 0.0100 \text{ M}$
70. A voltaic cell employs the redox reaction:

$$2 \text{Fe}^{3+}(\text{aq}) + 3 \text{Mg(s)} \longrightarrow 2 \text{Fe(s)} + 3 \text{Mg}^{2+}(\text{aq})$$

 Calculate the cell potential at 25°C under each set of conditions.

- a. standard conditions
 b. $[\text{Fe}^{3+}] = 1.0 \times 10^{-3} \text{ M}$; $[\text{Mg}^{2+}] = 2.50 \text{ M}$
 c. $[\text{Fe}^{3+}] = 2.00 \text{ M}$; $[\text{Mg}^{2+}] = 1.5 \times 10^{-3} \text{ M}$

71. An electrochemical cell is based on these two half-reactions:
 Ox: $\text{Pb(s)} \longrightarrow \text{Pb}^{2+}(\text{aq}, 1.10 \text{ M}) + 2 \text{e}^-$
 Red: $\text{MnO}_4^-(\text{aq}, 1.50 \text{ M}) + 4 \text{H}^+(\text{aq}, 2.0 \text{ M}) + 3 \text{e}^- \longrightarrow \text{MnO}_2(\text{s}) + 2 \text{H}_2\text{O(l)}$
 Calculate the cell potential at 25°C.
72. An electrochemical cell is based on these two half-reactions:
 Ox: $\text{Sn(s)} \longrightarrow \text{Sn}^{2+}(\text{aq}, 2.00 \text{ M}) + 2 \text{e}^-$
 Red: $\text{ClO}_2(\text{g}, 1.100 \text{ atm}) + \text{e}^- \longrightarrow \text{ClO}_2^-(\text{aq}, 2.00 \text{ M})$
 Calculate the cell potential at 25°C.
73. A voltaic cell consists of a Zn/Zn^{2+} half-cell and a Ni/Ni^{2+} half-cell at 25°C. The initial concentrations of Ni^{2+} and Zn^{2+} are 1.50 M and 0.100 M, respectively.
 a. What is the initial cell potential?
 b. What is the cell potential when the concentration of Ni^{2+} has fallen to 0.500 M?
 c. What are the concentrations of Ni^{2+} and Zn^{2+} when the cell potential falls to 0.45 V?
74. A voltaic cell consists of a Pb/Pb^{2+} half-cell and a Cu/Cu^{2+} half-cell at 25°C. The initial concentrations of Pb^{2+} and Cu^{2+} are 0.0500 M and 1.50 M, respectively.
 a. What is the initial cell potential?
 b. What is the cell potential when the concentration of Cu^{2+} has fallen to 0.200 M?
 c. What are the concentrations of Pb^{2+} and Cu^{2+} when the cell potential falls to 0.35 V?
75. Make a sketch of a concentration cell employing two Zn/Zn^{2+} half-cells. The concentration of Zn^{2+} in one of the half-cells is 2.0 M, and the concentration in the other half-cell is $1.0 \times 10^{-3} \text{ M}$. Label the anode and the cathode and indicate the half-reaction occurring at each electrode. Also indicate the direction of electron flow.
76. Consider the concentration cell:



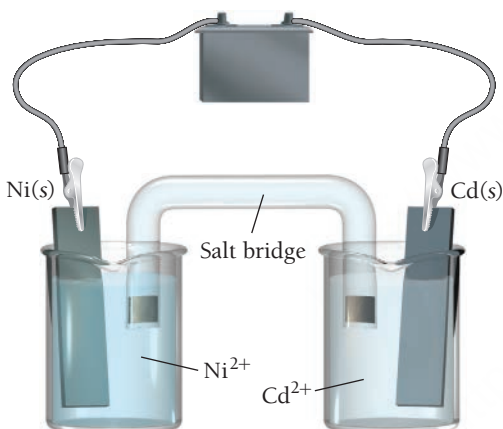
- a. Label the anode and cathode.
 b. Indicate the direction of electron flow.
 c. Indicate what happens to the concentration of Pb^{2+} in each half-cell.
77. A concentration cell consists of two Sn/Sn^{2+} half-cells. The cell has a potential of 0.10 V at 25°C. What is the ratio of the Sn^{2+} concentrations in the two half-cells?
78. A Cu/Cu^{2+} concentration cell has a voltage of 0.22 V at 25°C. The concentration of Cu^{2+} in one of the half-cells is $1.5 \times 10^{-3} \text{ M}$. What is the concentration of Cu^{2+} in the other half-cell? (Assume the concentration in the unknown cell to be the *lower* of the two concentrations.)

Batteries, Fuel Cells, and Corrosion

79. Determine the optimum mass ratio of Zn to MnO_2 in an alkaline battery.
80. What mass of lead sulfate is formed in a lead–acid storage battery when 1.00 g of Pb undergoes oxidation?
81. Refer to the tabulated values of ΔG_f° in Appendix IIB to calculate E_{cell}° for a fuel cell that employs the reaction between methane gas (CH_4) and oxygen to form carbon dioxide and gaseous water.
82. Refer to the tabulated values of ΔG_f° in Appendix IIB to calculate E_{cell}° for a fuel cell that employs the following reaction: (ΔG_f° for $\text{HC}_2\text{H}_3\text{O}_2(\text{g}) = -374.2 \text{ kJ/mol}$.)
- $$\text{CH}_3\text{CH}_2\text{OH}(\text{g}) + \text{O}_2(\text{g}) \longrightarrow \text{HC}_2\text{H}_3\text{O}_2(\text{g}) + \text{H}_2\text{O}(\text{g})$$
83. Determine whether or not each metal, if coated onto iron, would prevent the corrosion of iron.
- a. Zn b. Sn c. Mn
84. Determine whether or not each metal, if coated onto iron, would prevent the corrosion of iron.
- a. Mg b. Cr c. Cu

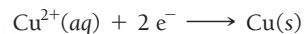
Electrolytic Cells and Electrolysis

85. Consider the electrolytic cell:



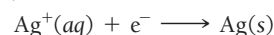
- a. Label the anode and the cathode and indicate the half-reactions occurring at each.
- b. Indicate the direction of electron flow.
- c. Label the terminals on the battery as positive or negative and calculate the minimum voltage necessary to drive the reaction.

86. Draw an electrolytic cell in which Mn^{2+} is reduced to Mn and Sn is oxidized to Sn^{2+} . Label the anode and cathode, indicate the direction of electron flow, and write an equation for the half-reaction occurring at each electrode. What minimum voltage is necessary to drive the reaction?
87. Write equations for the half-reactions that occur in the electrolysis of molten potassium bromide.
88. Which products are obtained in the electrolysis of molten NaI?
89. Write equations for the half-reactions that occur in the electrolysis of a mixture of molten potassium bromide and molten lithium bromide.
90. Which products are obtained in the electrolysis of a molten mixture of KI and KBr?
91. Write equations for the half-reactions that occur at the anode and cathode for the electrolysis of each aqueous solution:
- a. $\text{NaBr}(\text{aq})$ b. $\text{PbI}_2(\text{aq})$ c. $\text{Na}_2\text{SO}_4(\text{aq})$
92. Write equations for the half-reactions that occur at the anode and cathode for the electrolysis of each aqueous solution:
- a. $\text{Ni}(\text{NO}_3)_2(\text{aq})$ b. $\text{KCl}(\text{aq})$ c. $\text{CuBr}_2(\text{aq})$
93. Make a sketch of an electrolytic cell that electroplates copper onto other metal surfaces. Label the anode and the cathode and indicate the reactions that occur at each.
94. Make a sketch of an electrolytic cell that electroplates nickel onto other metal surfaces. Label the anode and the cathode and indicate the reactions that occur at each.
95. Copper can be electroplated at the cathode of an electrolytic cell by the half-reaction:



How much time does it take for 325 mg of copper to be plated at a current of 5.6 A?

96. Silver can be electroplated at the cathode of an electrolytic cell by the half-reaction:

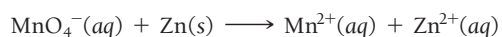


What mass of silver plates onto the cathode if a current of 6.8 A flows through the cell for 72 min?

97. A major source of sodium metal is the electrolysis of molten sodium chloride. What magnitude of current produces 1.0 kg of sodium metal in 1 hour?
98. What mass of aluminum metal can be produced per hour in the electrolysis of a molten aluminum salt by a current of 25 A?

CUMULATIVE PROBLEMS

99. Consider the unbalanced redox reaction:



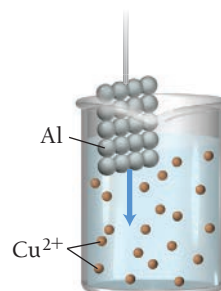
Balance the equation and determine the volume of a 0.500 M KMnO_4 solution required to completely react with 2.85 g of Zn.

100. Consider the unbalanced redox reaction:



Balance the equation and determine the volume of a 0.850 M $\text{K}_2\text{Cr}_2\text{O}_7$ solution required to completely react with 5.25 g of Cu.

101. Consider the molecular view of an Al strip and Cu^{2+} solution. Draw a similar sketch showing what happens to the atoms and ions after the Al strip is submerged in the solution for a few minutes.



118. Calculate $\Delta G^\circ_{\text{rxn}}$ and K for each reaction.
- The reaction of $\text{Cr}^{2+}(\text{aq})$ with $\text{Cr}_2\text{O}_7^{2-}(\text{aq})$ in acid solution to form $\text{Cr}^{3+}(\text{aq})$.
 - The reaction of $\text{Cr}^{3+}(\text{aq})$ and $\text{Cr}(\text{s})$ to form $\text{Cr}^{2+}(\text{aq})$. [The electrode potential of $\text{Cr}^{2+}(\text{aq})$ to $\text{Cr}(\text{s})$ is -0.91 V .]
119. The molar mass of a metal (M) is 50.9 g/mol ; it forms a chloride of unknown composition. Electrolysis of a sample of the molten chloride with a current of 6.42 A for 23.6 minutes produces 1.20 g of M at the cathode. Determine the empirical formula of the chloride.
120. A metal forms the fluoride MF_3 . Electrolysis of the molten fluoride by a current of 3.86 A for 16.2 minutes deposits 1.25 g of the metal. Calculate the molar mass of the metal.
121. A sample of impure tin of mass 0.535 g is dissolved in strong acid to give a solution of Sn^{2+} . The solution is then titrated with a 0.0448 M solution of NO_3^- , which is reduced to $\text{NO}(\text{g})$. The equivalence point is reached upon the addition of 0.0344 L of the NO_3^- solution. Find the percent by mass of tin in the original sample, assuming that it contains no other reducing agents.
122. A 0.0251-L sample of a solution of Cu^+ requires 0.0322 L of 0.129 M KMnO_4 solution to reach the equivalence point. The products of the reaction are Cu^{2+} and Mn^{2+} . What is the concentration of the Cu^{2+} solution?
123. A current of 11.3 A is applied to 1.25 L of a solution of 0.552 M HBr , converting some of the H^+ to $\text{H}_2(\text{g})$, which bubbles out of the solution. What is the pH of the solution after 73 minutes ?
124. A 215 mL sample of a 0.500 M NaCl solution with an initial pH of 7.00 is subjected to electrolysis. After 15.0 minutes , a 10.0 mL portion (or aliquot) of the solution is removed from the cell and titrated with 0.100 M HCl solution. The endpoint in the titration is reached upon addition of 22.8 mL of HCl . Assuming constant current, how much current (in A) was running through the cell?
125. An $\text{MnO}_2(\text{s})/\text{Mn}^{2+}(\text{aq})$ electrode in which the pH is 10.24 is prepared. Find the $[\text{Mn}^{2+}]$ necessary to lower the potential of the half-cell to 0.00 V (at 25°C).
126. To what pH should you adjust a standard hydrogen electrode to achieve an electrode potential of -0.122 V ? (Assume that the partial pressure of hydrogen gas remains at 1 atm .)

CHALLENGE PROBLEMS

127. Suppose a hydrogen–oxygen fuel-cell generator produces electricity for a house. Use the balanced redox reactions and the standard cell potential to predict the volume of hydrogen gas (at STP) required each month to generate the electricity. Assume the home uses $1.2 \times 10^3 \text{ kWh}$ of electricity per month.
128. A voltaic cell designed to measure $[\text{Cu}^{2+}]$ is constructed of a standard hydrogen electrode and a copper metal electrode in the Cu^{2+} solution of interest. If you want to construct a calibration curve for how the cell potential varies with the concentration of copper(II), what do you plot in order to obtain a straight line? What is the slope of the line?
129. The surface area of an object to be gold plated is 49.8 cm^2 , and the density of gold is 19.3 g/cm^3 . A current of 3.25 A is applied to a solution that contains gold in the $+3$ oxidation state. Calculate the time required to deposit an even layer of gold $1.00 \times 10^{-3} \text{ cm}$ thick on the object.
130. Electrodepositing all the Cu and Cd from a solution of CuSO_4 and CdSO_4 required 1.20 F of electricity ($1 \text{ F} = 1 \text{ mol e}^-$). The mixture of Cu and Cd that was deposited had a mass of 50.36 g . What mass of CuSO_4 was present in the original mixture?
131. Sodium oxalate, $\text{Na}_2\text{C}_2\text{O}_4$, in solution is oxidized to $\text{CO}_2(\text{g})$ by MnO_4^- , which is reduced to Mn^{2+} . A 50.1-mL volume of a solution of MnO_4^- is required to titrate a 0.339 g sample of sodium oxalate. This solution of MnO_4^- is used to analyze uranium-containing samples. A 4.62-g sample of a uranium-containing material requires 32.5 mL of the solution for titration. The oxidation of the uranium can be represented by the change $\text{UO}^{2+} \longrightarrow \text{UO}_2^{2+}$. Calculate the percentage of uranium in the sample.
132. Three electrolytic cells are connected in a series. The electrolytes in the cells are aqueous copper(II) sulfate, gold(III) sulfate, and silver nitrate. A current of 2.33 A is applied, and after some time 1.74 g Cu is deposited. How long was the current applied? What mass of gold and silver was deposited?
133. The cell $\text{Pt}(\text{s}) | \text{Cu}^+(1 \text{ M}), \text{Cu}^{2+}(1 \text{ M}) || \text{Cu}^+(1 \text{ M}) | \text{Cu}(\text{s})$ has $E^\circ_{\text{cell}} = 0.364 \text{ V}$. The cell $\text{Cu}(\text{s}) | \text{Cu}^{2+}(1 \text{ M}) || \text{Cu}^+(1 \text{ M}) | \text{Cu}(\text{s})$ has $E^\circ_{\text{cell}} = 0.182 \text{ V}$. Write the cell reaction for each cell and explain the differences in E°_{cell} . Calculate ΔG° for each cell reaction to help explain these differences.

CONCEPTUAL PROBLEMS

134. An electrochemical cell has a positive standard cell potential but a negative cell potential. Which statement is true?
- $K > 1$; $Q > K$
 - $K < 1$; $Q > K$
 - $K > 1$; $Q < K$
 - $K < 1$; $Q < K$
135. Which oxidizing agent oxidizes Br^- but not Cl^- ?
- $\text{K}_2\text{Cr}_2\text{O}_7$ (in acid)
 - KMnO_4 (in acid)
 - HNO_3
136. A redox reaction employed in an electrochemical cell has a negative $\Delta G^\circ_{\text{rxn}}$. Which statement is true?
- E°_{cell} is positive; $K < 1$
 - E°_{cell} is negative; $K > 1$
 - E°_{cell} is negative; $K > 1$
 - E°_{cell} is positive; $K < 1$
137. A redox reaction has an equilibrium constant of $K = 0.055$. What is true of $\Delta G^\circ_{\text{rxn}}$ and E°_{cell} for this reaction?

QUESTIONS FOR GROUP WORK

Active Classroom Learning

Discuss these questions with the group and record your consensus answer.

138. Balance the redox reactions by following the steps in the text. Rotate through the group, having each group member do the next step in the process and explaining that step to the rest of the group.
- $\text{I}_2(\text{s}) + \text{Fe}(\text{s}) \longrightarrow \text{FeI}_2(\text{s})$
 - $\text{Cl}_2(\text{g}) + \text{H}_2\text{O}_2(\text{aq}) \longrightarrow \text{Cl}^-(\text{aq}) + \text{O}_2(\text{g})$ (acidic)
 - $\text{Hg}^{2+}(\text{aq}) + \text{H}_2(\text{g}) \longrightarrow \text{Hg}(\text{l}) + \text{H}_2\text{O}(\text{l})$ (basic)
 - $\text{CH}_3\text{OH}(\text{l}) + \text{O}_2(\text{g}) \longrightarrow \text{CO}_2(\text{g}) + \text{H}_2\text{O}(\text{l})$ (acidic)
139. Have each group member select a half-reaction from Table 19.1. Each member should calculate the standard cell potential of an electrochemical cell formed between each member's half-reaction and the half-reaction of each of the other group members. For each pair of half-reactions, write the overall balanced chemical reaction that is spontaneous.
140. Calculate ΔG° and K for each reaction the group created in Question 139. For one of the reactions, explain how the sign or magnitude of each quantity (E°_{cell} , ΔG° , and K) is consistent with the fact that the reaction is spontaneous in the direction written.
141. Design a device that uses an electrochemical cell to determine the amount of Cu^{2+} in a sample of water. Describe, in detail, the construction and the theory of operation of your device. If you are able to measure voltage with one-millivolt accuracy, what will be the uncertainty in your measured concentration?
142. Using a library or the Internet, research a fuel cell that uses methanol for fuel. What is the reaction at the anode? What is the reaction at the cathode? What is the overall reaction? What is the standard cell potential? How many kWh can it generate from 1 L (0.792 kg) of methanol?

DATA INTERPRETATION AND ANALYSIS

143. In this chapter, you have seen that the voltage of an electrochemical cell is sensitive to the concentrations of the reactants and products in the cell. As a result, electrochemical cells can be used to measure the concentrations of certain species in solution. For example, the voltage of an electrochemical cell based on the reaction $\text{H}_2(\text{g}) + \text{Cu}^{2+}(\text{aq}) \longrightarrow 2\text{H}^+ + \text{Cu}(\text{s})$ is sensitive to both the Cu^{2+} concentration and the H^+ concentration in solution. If the H^+ concentration is held constant, then the voltage only depends on the Cu^{2+} concentration, and we can use the cell to measure the Cu^{2+} concentration in an unknown solution. The tabulated data show the measured voltage in the hydrogen/copper electrochemical cell just discussed for several Cu^{2+} concentrations. Examine the data and answer the questions that follow.

$[\text{Cu}^{2+}]$	Voltage (V)
0.100	0.310
0.200	0.319
0.300	0.325
0.400	0.328
0.500	0.331
0.700	0.335
1.00	0.340

- Construct a graph of the measured voltage versus the the copper concentration. Is the graph linear?
- Determine how you might manipulate the data to produce a linear graph. (*Hint:* See the Nernst equation.)
- Reconstruct a graph of the data using the method to produce a linear graph from part b. Determine the slope and y-intercept of the best-fitting line to the points in your graph. Could you have predicted the slope and intercept from the Nernst equation?
- The voltage of two unknown solutions are measured and recorded. Use the slope and intercept from part c to determine the Cu^{2+} concentrations of the unknown solutions.

Unknown Cu^{2+} Solution	Voltage (V)
i	0.303
ii	0.338

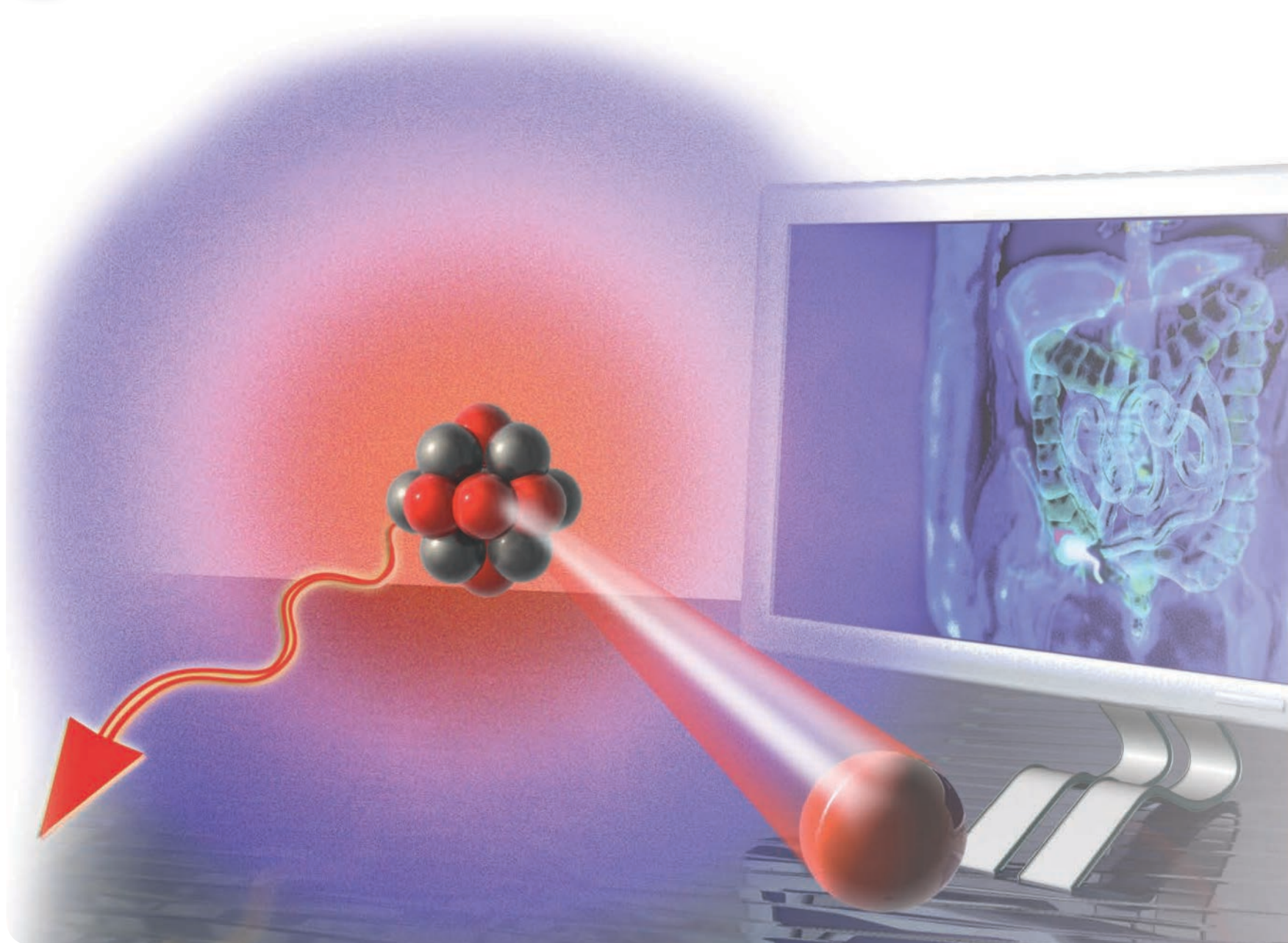
ANSWERS TO CONCEPTUAL CONNECTIONS

- Cc 19.1 (a) In a voltaic cell, electrons flow from higher potential energy to lower potential energy (from the anode to the cathode).
- Cc 19.2 (b) A negative electrode potential indicates that an electron at that electrode has greater potential energy than it has at a standard hydrogen electrode.
- Cc 19.3 (d) The reduction of HNO_3 is listed below the reduction of Br_2 and above the reduction of I_2 in Table 19.1. Since any reduction half-reaction is spontaneous when paired with the reverse of a half-reaction below it in the table, the reduction of HNO_3 is spontaneous when paired with the oxidation of I^- but is not spontaneous when paired with the oxidation of Br^- .
- Cc 19.4 (c) Ag falls *above* the half-reaction for the reduction of H^+ but *below* the half-reaction for the reduction of NO_3^- in Table 19.1.
- Cc 19.5 (a) Br is more electronegative than I. If the two atoms were in competition for the electron, the electron would go to the more electronegative atom (Br). Therefore, I_2 does not spontaneously gain electrons from Br^- .
- Cc 19.6 (c) Since $K > 1$, the reaction is spontaneous under standard conditions (when $Q = 1$, the reaction proceeds toward the products). Therefore, E°_{cell} is positive and $\Delta G^\circ_{\text{rxn}}$ is negative.
- Cc 19.7 (a) Since $K < 1$, E°_{cell} is negative (under standard conditions, the reaction is not spontaneous). Since $Q < K$, E_{cell} is positive (the reaction is spontaneous under the nonstandard conditions of the cell).
- Cc 19.8 Cu. The electrode potential for Fe is more negative than that of Cu. Therefore, Fe oxidizes more easily than Cu.

- 20.1** Diagnosing Appendicitis 893
- 20.2** The Discovery of Radioactivity 894
- 20.3** Types of Radioactivity 895
- 20.4** The Valley of Stability: Predicting the Type of Radioactivity 900
- 20.5** Detecting Radioactivity 903
- 20.6** The Kinetics of Radioactive Decay and Radiometric Dating 904
- 20.7** The Discovery of Fission: The Atomic Bomb and Nuclear Power 910

- 20.8** Converting Mass to Energy: Mass Defect and Nuclear Binding Energy 914
- 20.9** Nuclear Fusion: The Power of the Sun 917
- 20.10** Nuclear Transmutation and Transuranium Elements 918
- 20.11** The Effects of Radiation on Life 919
- 20.12** Radioactivity in Medicine and Other Applications 922

Key Learning Outcomes 926



Antibodies labeled with radioactive atoms help to diagnose an infected appendix.

CHAPTER

20

Radioactivity and Nuclear Chemistry

IN THIS CHAPTER, WE EXAMINE RADIOACTIVITY and nuclear chemistry, both of which involve changes within the *nuclei* of atoms. Unlike typical chemical processes, in which elements retain their identity, nuclear reactions often result in one element changing into another, frequently emitting tremendous amounts of energy in the process. Radioactivity has numerous applications, including the diagnosis and treatment of medical conditions such as cancer, thyroid disease, abnormal kidney and bladder function, and heart disease. Naturally occurring radioactivity allows us to estimate the age of fossils, rocks, and ancient artifacts. And the study of radioactivity, perhaps most famously, led to the discovery of nuclear fission, used for electricity generation and nuclear weapons. In this chapter, we discuss radioactivity—how it was discovered, what it is, and how we use it. Radioactivity—like other chemical phenomena we have explored—also depends on structure, but in nuclear processes it is the structure of the nucleus that determines the radioactive properties. A complete explanation of how nuclear structure affects radioactive properties is beyond our scope, but in this chapter we at least begin to explore some of the important factors.

“I am among those who think that science has great beauty. A scientist in his laboratory is not only a technician; he is also a child placed before natural phenomena which impress him like a fairy tale.”

—Marie Curie (1867–1934)

20.1 Diagnosing Appendicitis

One morning a few years ago I awoke with a dull pain on the lower right side of my abdomen that grew worse by early afternoon. Since pain in this area can indicate appendicitis (inflammation of the appendix), and since I know that appendicitis can be dangerous if left untreated, I went to the hospital emergency room. The doctor who examined me recommended a simple blood test to determine my white blood cell count. Patients with appendicitis usually have a high white blood cell count because the body produces white blood cells in an effort to fight the infection. My blood test was negative—I had a normal white blood cell count.

Although my symptoms were consistent with appendicitis, the negative blood test clouded the diagnosis. The doctor said that I could elect to have my appendix removed anyway (even though it might be healthy) or I could submit to another test that might confirm the appendicitis. I chose the additional test, which involved *nuclear medicine*, an area of medical practice that employs *radioactivity* to diagnose and treat disease. **Radioactivity** is the emission of subatomic particles or high-energy electromagnetic radiation by the nuclei of certain atoms. Such atoms are said to be **radioactive**. Most radioactive emissions can pass through many types of matter (such as skin and muscle, in this case).

During the test, antibodies (naturally occurring molecules that fight infection) labeled with radioactive atoms were injected into my bloodstream. Since antibodies attack infection, they migrate to areas of the body where infection is present. If my appendix was infected, the antibodies would accumulate there. I waited about an hour, and then the technician took me to a room and laid me on a table. She inserted a photographic film in a panel above me and removed the covering that prevents exposure of the film. Radioactivity is invisible to the eye, but it exposes photographic film. If my appendix was infected, it would have (by then) contained a high concentration of the radioactively labeled antibodies. The antibodies would emit radiation and expose the film. The test, however, was negative. No radioactivity was emanating from my appendix. After several hours, the pain in my abdomen subsided and I went home. I never did find out what caused the pain.

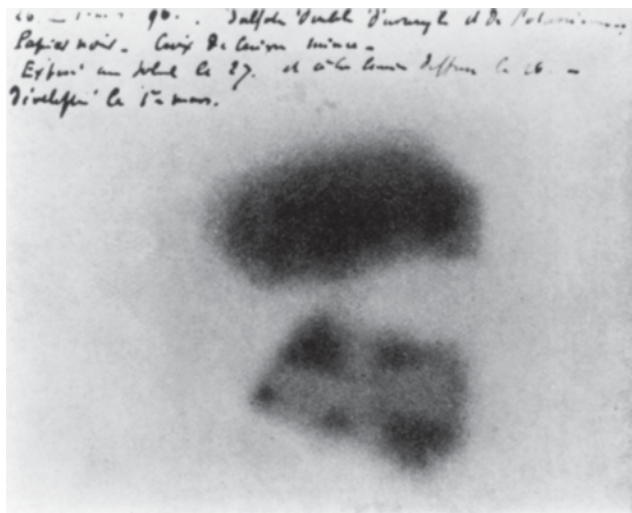
20.2 The Discovery of Radioactivity



▲ The greenish light emitted from glow-in-the-dark toys is phosphorescence.

Radioactivity was first observed in 1896 by French scientist Antoine-Henri Becquerel (1852–1908). Becquerel was interested in the newly discovered X-rays (see Section 2.2), which had become a hot topic of physics research at the time. He hypothesized that X-rays were emitted in conjunction with **phosphorescence**, the long-lived *emission* of light that sometimes follows the absorption of light by certain atoms and molecules. Phosphorescence is probably most familiar to you as the *glow* in glow-in-the-dark products (such as toys or stickers). After such a product is exposed to light, it reemits some of that light, usually at slightly longer wavelengths. If you turn off the room lights or put the glow-in-the-dark product in the dark, you see the greenish glow of the emitted light. Becquerel hypothesized that this visible greenish glow was associated with the emission of X-rays (which are invisible).

To test his hypothesis, Becquerel placed crystals—composed of potassium uranyl sulfate, a compound known to phosphoresce—on top of a photographic plate wrapped in black cloth. He then exposed the crystals to sunlight. He knew the crystals had phosphoresced because he could see the emitted light when he brought them back into the dark. If the crystals had also emitted X-rays, the X-rays would have passed through the black cloth and exposed the underlying photographic plate. Becquerel performed the experiment several times and always got the same result—the photographic plate showed a dark exposure spot where the crystals had been (**Figure 20.1 ▼**). Becquerel believed his hypothesis was correct and presented the results—that phosphorescence and X-rays were linked—to the French Academy of Sciences.



► **FIGURE 20.1 The Discovery of Radioactivity** This photographic plate (with Becquerel's original comments at top) played a key role in the discovery of radioactivity. Becquerel placed a uranium-containing compound on the plate (which was wrapped in black cloth to shield it from visible light). He found that the plate was darkened by some unknown form of penetrating radiation that was produced continuously, independently of phosphorescence.

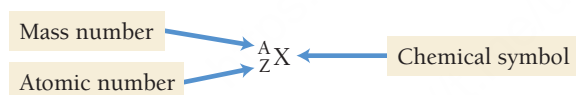
Becquerel later retracted his results, however, when he discovered that a photographic plate with the same crystals showed a dark exposure spot even after the plate and the crystals had been stored in a drawer and not exposed to sunlight. Becquerel realized that the crystals themselves were constantly emitting something that exposed the photographic plate, regardless of whether or not they phosphoresced. Becquerel concluded that it was the uranium within the crystals that was the source of the emissions, and he named the emissions *uranic rays*.

Soon after Becquerel's discovery, a young graduate student named Marie Skłodowska Curie (1867–1934) (one of the first women in France to pursue doctoral work) decided to study uranic rays for her doctoral thesis. Her first task was to determine whether any other substances besides uranium (the heaviest known element at the time) emitted these rays. In her search, Curie discovered two new elements, both of which also emitted uranic rays. Curie named one of her newly discovered elements polonium, after her home country of Poland. The other element she named radium, because of its high level of radioactivity. Radium is so radioactive that it gently glows in the dark and emits significant amounts of heat. Since it was clear that these rays were not unique to uranium, Curie changed the name of uranic rays to radioactivity. In 1903, Curie, and her husband, Pierre Curie, as well as Becquerel were all awarded the Nobel Prize in physics for the discovery of radioactivity. In 1911, Curie received a second Nobel Prize, this time in chemistry, for her discovery of the two new elements.

20.3 Types of Radioactivity

While Curie focused her work on discovering the different kinds of radioactive elements, Ernest Rutherford (1871–1937) and others focused on characterizing the radioactivity itself. These scientists found that the emissions are produced by the nuclei of radioactive atoms. Such nuclei are unstable and spontaneously decompose, emitting small pieces of themselves to gain stability. These fragments are the radioactivity that Becquerel and Curie detected. Natural radioactivity can be categorized into several different types, including *alpha* (α) *decay*, *beta* (β) *decay*, *gamma* (γ) *ray emission*, and *positron emission*. In addition, some unstable atomic nuclei can attain greater stability by absorbing an electron from one of the atom's own orbitals, a process called *electron capture*.

In order to understand these different types of radioactivity, we must briefly review the notation for symbolizing isotopes from Section 1.8. Recall that we can represent any isotope with the following notation:



mass number (A) = the sum of the number of protons and number of neutrons in the nucleus

atomic number (Z) = the number of protons in the nucleus

A represents the sum of the number of protons and neutrons, and Z represents the number of protons, so the number of neutrons in the nucleus (N) is $A - Z$.

$$\begin{array}{c} N = A - Z \\ \uparrow \\ \text{Number of neutrons} \end{array}$$

For example, the symbol $^{21}_{10}\text{Ne}$ represents the neon isotope containing 10 protons and 11 neutrons. The symbol $^{20}_{10}\text{Ne}$ represents the neon isotope containing 10 protons and 10 neutrons. Remember that most elements have several different isotopes. When we are discussing nuclear properties, we often refer to a particular isotope (or species) of an element as a **nuclide**.

We represent the main subatomic particles—protons, neutrons, and electrons—with similar notation.

proton symbol ^1_1p neutron symbol ^1_0n electron symbol $^0_{-1}\text{e}$



▲ Marie Curie, one of the first women in France to pursue a doctoral degree, was twice awarded the Nobel Prize, in 1903 and 1911. She is seen here with her daughters, in about 1905. Irène (left) became a distinguished nuclear physicist in her own right, winning a Nobel Prize in 1935. Eve (right) wrote a highly acclaimed biography of her mother.

Element 96 is named curium in honor of Marie Curie and her contributions to our understanding of radioactivity.



KEY CONCEPT VIDEO
Types of Radioactivity



▲ Radium, discovered by Marie Curie, is so radioactive that it glows visibly and emits heat.

The 1 in the lower left of the proton symbol represents 1 proton, and the 0 in the lower left corner of the neutron symbol represents 0 protons. The -1 in the lower left corner of the electron symbol is a bit different from the other atomic numbers; it will make sense when we see it in the context of nuclear decay a bit later in this section.

Alpha (α) Decay

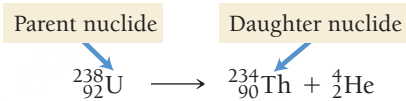
As we discuss in Section 20.4, nuclei are unstable when they are too large or when they contain an unbalanced ratio of neutrons to protons.

In nuclear chemistry, we are primarily interested in changes within the nucleus; therefore, the 2+ charge that we would normally write for a helium nucleus is omitted for an alpha particle.

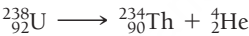
Alpha (α) decay occurs when an unstable nucleus emits a particle composed of two protons and two neutrons (**Figure 20.2** ▼). Since two protons and two neutrons combined are identical to a helium-4 nucleus, the symbol for alpha radiation is the symbol for helium-4:



When an element emits an alpha particle, the number of protons in its nucleus changes, transforming the element into a different element. We symbolize this phenomenon with a **nuclear equation**, an equation that represents nuclear processes such as radioactivity. For example, the nuclear equation for the alpha decay of uranium-238 is:

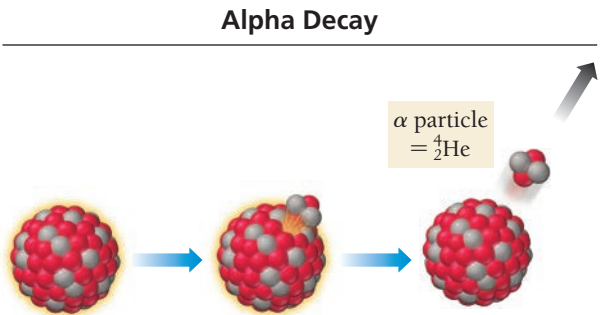


We call the original atom the *parent nuclide* and the product of the decay the *daughter nuclide*. In this case, uranium-238 (the parent nuclide) becomes thorium-234 (the daughter nuclide). Unlike a chemical reaction, in which elements retain their identities, in a nuclear reaction elements often change their identities. Like a chemical equation, however, a nuclear equation must be balanced. *The sum of the atomic numbers on both sides of a nuclear equation must be equal, and the sum of the mass numbers on both sides must also be equal.*



Reactants	Products
sum of mass numbers = 238	sum of mass numbers = 234 + 4 = 238
sum of atomic numbers = 92	sum of atomic numbers = 90 + 2 = 92

We can deduce the identity and symbol of the daughter nuclide in any alpha decay from the mass and atomic number of the parent nuclide. During alpha decay, the mass number decreases by 4 and the atomic number decreases by 2, as shown in Example 20.1.



▲ **FIGURE 20.2 Alpha Decay** In alpha decay, a nucleus emits a particle composed of two protons and two neutrons (a helium-4 nucleus).

EXAMPLE 20.1

Writing Nuclear Equations for Alpha Decay

Interactive
Worked Example
Video 20.1

PEARSON
eText
2.0


Write the nuclear equation for the alpha decay of Ra-224.	
SOLUTION	
Begin with the symbol for Ra-224 on the left side of the equation and the symbol for an alpha particle on the right side.	$^{224}_{88}\text{Ra} \longrightarrow ? + ^4_2\text{He}$
Equalize the sum of the mass numbers and the sum of the atomic numbers on both sides of the equation by writing the appropriate mass number and atomic number for the unknown daughter nuclide.	$^{224}_{88}\text{Ra} \longrightarrow ^{220}_{86} ? + ^4_2\text{He}$
Refer to the periodic table to deduce the identity of the unknown daughter nuclide from its atomic number and write its symbol. The atomic number is 86, so the daughter nuclide is radon (Rn).	$^{224}_{88}\text{Ra} \longrightarrow ^{220}_{86}\text{Rn} + ^4_2\text{He}$
FOR PRACTICE 20.1	
Write the nuclear equation for the alpha decay of Po-216.	

Alpha radiation is the 18-wheeler truck of radioactivity. The alpha particle is by far the most massive of all particles commonly emitted by radioactive nuclei. Consequently, alpha radiation has the most potential to interact with and damage other molecules, including biological ones. Highly energetic radiation interacts with other molecules and atoms by ionizing them. When radiation ionizes molecules within the cells of living organisms, the cells can usually repair the damage. However, in some cases, the cells can die or begin to reproduce abnormally. The ability of radiation to ionize molecules and atoms is called its **ionizing power**. Of all types of radioactivity, alpha radiation has the highest ionizing power.

However, alpha particles, because of their large size, have the lowest **penetrating power**—the ability to penetrate matter. (Imagine a semitruck trying to get through a traffic jam.) In order for radiation to damage important molecules within living cells, it must penetrate into the cell. Alpha radiation does not easily penetrate into cells because it can be stopped by a sheet of paper, by clothing, or even by air. Consequently, a low-level alpha emitter that remains outside the body is relatively safe. If an alpha emitter is ingested in significant amounts, however, it becomes dangerous because the alpha particles then have direct access to the molecules that compose organs and tissues.

Beta (β) Decay

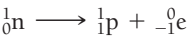
Beta (β) decay occurs when an unstable nucleus emits an electron (**Figure 20.3 ▶**). How does a nucleus, which contains only protons and neutrons, emit an electron? In some unstable nuclei, a neutron changes into a proton and emits an electron.



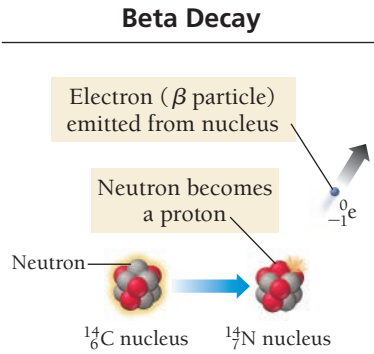
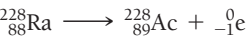
The symbol for a beta (β) particle in a nuclear equation is:



We can represent beta decay with a nuclear equation:



The -1 reflects the charge of the electron, which is equivalent to an atomic number of -1 in a nuclear equation. When an atom emits a beta particle, its atomic number increases by 1 because it now has an additional proton. For example, the nuclear equation for the beta decay of radium-228 is:



▲ **FIGURE 20.3 Beta Decay** In beta decay, a neutron emits an electron and becomes a proton.

This kind of beta radiation is also called beta minus (β^-) radiation due to its negative charge.

Notice that the nuclear equation is balanced—the sum of the mass numbers on both sides is equal, and the sum of the atomic numbers on both sides is equal.

Beta radiation is the four-door sedan of radioactivity. Beta particles are much less massive than alpha particles and consequently have a lower ionizing power. However, because of their smaller size, beta particles have a higher penetrating power and only something as substantive as a sheet of metal or a thick piece of wood stops them. Consequently, a beta emitter outside of the body poses a higher risk than an alpha emitter. If ingested, however, the beta emitter does less damage than an alpha emitter.

Gamma (γ) Ray Emission

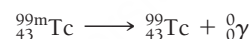
Gamma (γ) ray emission is significantly different from alpha or beta radiation. Gamma radiation is a form of *electromagnetic* radiation (see Section 2.2). Gamma rays are high-energy (short-wavelength) photons. The symbol for a gamma ray is:



A gamma ray has no charge and no mass. When a gamma-ray photon is emitted from a radioactive atom, it does not change the mass number or the atomic number of the element. Gamma rays are usually emitted from nuclei in excited states or in conjunction with other types of radiation. For example, the alpha emission of U-238 (discussed previously) is accompanied by the emission of a gamma ray:



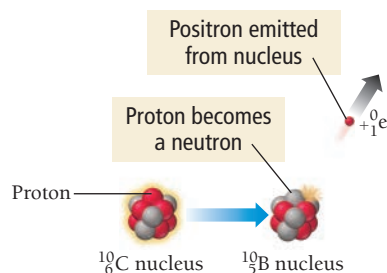
The emission of gamma rays in conjunction with other types of radiation is so common that it is often left out of nuclear equations. Nuclear chemists simply understand that the gamma rays are emitted along with the other types of decay. However, in some instances, there can be a delay between the initial decay and the subsequent emission of gamma rays. The initial decay leaves the daughter nucleus in *metastable* state (an unstable state that can exist for a prolonged period of time). The daughter then emits a gamma particle at a later time. For example, technetium-99 has a gamma-emitting metastable state:



The m next to the mass number stands for metastable.

Gamma rays are the motorbikes of radioactivity. They have the lowest ionizing power but the highest penetrating power. (Imagine a motorbike zipping through a traffic jam.) Shielding gamma rays requires several inches of lead or thick slabs of concrete.

Positron Emission



▲ FIGURE 20.4 Positron Emission In positron emission, a proton emits a positron and becomes a neutron.

Positron emission can be thought of as a type of beta emission and is sometimes referred to as beta plus emission (β^+).

Positron Emission

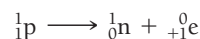
Positron emission occurs when an unstable nucleus emits a positron (**Figure 20.4** ◀). A **positron** is the *antiparticle* of the electron; it has the same mass as an electron but the opposite charge. If a positron collides with an electron, the two particles annihilate each other, releasing energy in the form of gamma rays. In positron emission, a proton becomes a neutron and emits a positron.



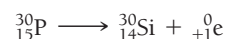
The symbol for a positron in a nuclear equation is:



We can represent positron emission with this nuclear equation:



When an atom emits a positron, its atomic number *decreases* by 1 because it has one less proton after emission. Consider the nuclear equation for the positron emission of phosphorus-30 as an example:



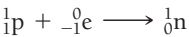
We can determine the identity and symbol of the daughter nuclide in any positron emission in a manner similar to that used for alpha and beta decay, as shown in Example 20.2. Positrons are similar to beta particles in their ionizing and penetrating power.

Electron Capture

Unlike the forms of radioactive decay discussed so far, electron capture involves a particle being *absorbed* by instead of *emitted from* an unstable nucleus. **Electron capture** occurs when a nucleus assimilates an electron from an inner orbital of its electron cloud. Like positron emission, the net effect of electron capture is the conversion of a proton into a neutron.



We can represent electron capture with this nuclear equation:



When an atom undergoes electron capture, its atomic number decreases by 1 because it has one less proton. For example, when Ru-92 undergoes electron capture, its atomic number changes from 44 to 43:

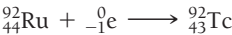


Table 20.1 (on the next page) summarizes the different kinds of radiation.

EXAMPLE 20.2

Writing Nuclear Equations for Beta Decay, Positron Emission, and Electron Capture

Interactive
Worked Example
Video 20.2

PEARSON
eText
2.0

Write the nuclear equation for each type of decay.

(a) beta decay in Bk-249

(b) positron emission in O-15

(c) electron capture in I-111

SOLUTION

(a) In beta decay, the atomic number <i>increases</i> by 1 and the mass number remains unchanged. The daughter nuclide is element number 98, californium.	$^{249}_{97}\text{Bk} \longrightarrow ^{249}_{98}\text{?} + ^0_{-1}\text{e}$ $^{249}_{97}\text{Bk} \longrightarrow ^{249}_{98}\text{Cf} + ^0_{-1}\text{e}$
(b) In positron emission, the atomic number <i>decreases</i> by 1 and the mass number remains unchanged. The daughter nuclide is element number 7, nitrogen.	$^{15}_8\text{O} \longrightarrow ^{15}_7\text{?} + ^0_{+1}\text{e}$ $^{15}_8\text{O} \longrightarrow ^{15}_7\text{N} + ^0_{+1}\text{e}$
(c) In electron capture, the atomic number also <i>decreases</i> by 1 and the mass number remains unchanged. The daughter nuclide is element number 52, tellurium.	$^{111}_{53}\text{I} + ^0_{-1}\text{e} \longrightarrow ^{111}_{52}\text{?}$ $^{111}_{53}\text{I} + ^0_{-1}\text{e} \longrightarrow ^{111}_{52}\text{Te}$

FOR PRACTICE 20.2

(a) Write three nuclear equations to represent the nuclear decay sequence that begins with the alpha decay of U-235 followed by a beta decay of the daughter nuclide and then another alpha decay.

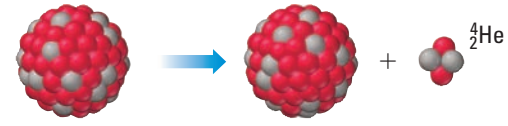
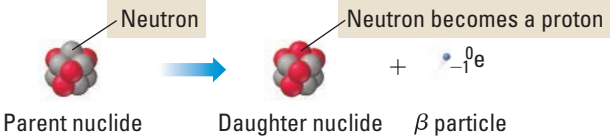
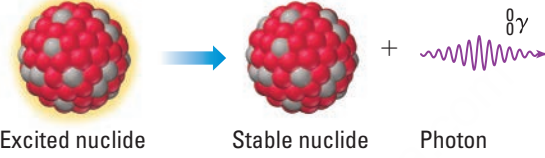
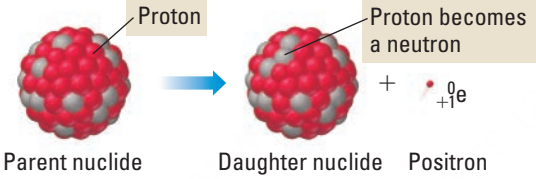
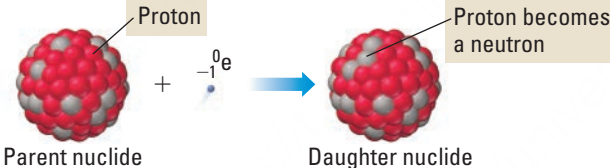
(b) Write the nuclear equation for the positron emission of Na-22.

(c) Write the nuclear equation for electron capture in Kr-76.

FOR MORE PRACTICE 20.2

Potassium-40 decays to produce Ar-40. What is the method of decay? Write the nuclear equation for this decay.

TABLE 20.1 Modes of Radioactive Decay

Decay Mode	Process	Change in: A Z N/Z*	Example
α	 Parent nuclide Daughter nuclide α particle	-4 -2 Increase	${}^{238}_{92}\text{U} \longrightarrow {}^{234}_{90}\text{Th} + {}^4_2\text{He}$
β	 Parent nuclide Daughter nuclide β particle	0 +1 Decrease	${}^{228}_{88}\text{Ra} \longrightarrow {}^{228}_{89}\text{Ac} + {}^0_{-1}\text{e}$
γ	 Excited nuclide Stable nuclide Photon	0 0 None	${}^{99\text{m}}_{43}\text{Tc} \longrightarrow {}^{99}_{43}\text{Tc} + {}^0_0\gamma$
Positron emission	 Parent nuclide Daughter nuclide Positron	0 -1 Increase	${}^{30}_{15}\text{P} \longrightarrow {}^{30}_{14}\text{Si} + {}^0_{+1}\text{e}$
Electron capture	 Parent nuclide Daughter nuclide	0 -1 Increase	${}^{92}_{44}\text{Ru} + {}^0_{-1}\text{e} \longrightarrow {}^{92}_{43}\text{Tc}$

* Neutron-to-proton ratio



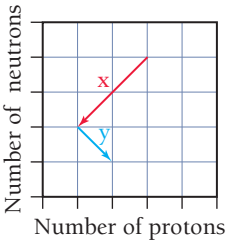
20.1
Cc

Conceptual
Connection

Alpha and Beta Decay

Consider the graphical representation of a series of decays shown here. Which kinds of decay do the arrows labeled x and y represent?

- (a) x corresponds to alpha decay and y corresponds to positron emission
- (b) x corresponds to positron emission and y corresponds to alpha decay
- (c) x corresponds to alpha decay and y corresponds to beta decay
- (d) x corresponds to beta decay and y corresponds to alpha decay



20.4 The Valley of Stability: Predicting the Type of Radioactivity

So far, we have described various different types of radioactivity. But what causes a particular nuclide to be radioactive in the first place? And why do some nuclides decay via alpha decay, while others decay

via beta decay or positron emission? Nuclear properties—like all properties—depend on structure, but in this case the relevant structure is not that of an atom or molecule but of the nucleus. The particles that compose the nucleus—protons and neutrons—occupy energy levels that are similar to the energy levels occupied by electrons. A full examination of nuclear structure is beyond the scope of this text, but we can examine a couple of simple factors that influence the stability of the nucleus and the nature of its decay.

A nucleus is a collection of **nucleons**—protons (positively charged) and neutrons (uncharged). We know that positively charged particles such as protons repel one another. So what binds the nucleus together? A fundamental force of physics known as the **strong force** binds the nucleus together. All nucleons are attracted to one another by the strong force. However, the strong force acts only at very short distances. We can think of the stability of a nucleus as a balance between the *repulsive* coulombic force among protons and the *attractive* strong force among all nucleons.

The neutrons in a nucleus, therefore, play an important role in stabilizing the nucleus because they attract other nucleons (through the strong force) but lack the repulsive force associated with positive charge. It might seem that adding more neutrons would *always* lead to greater stability, so that the more neutrons the better. This is not the case, however, because as we just discussed protons and neutrons occupy energy levels in a nucleus. As you add more neutrons, they must occupy increasingly higher-energy levels within the nucleus. At some point, the energy payback from the strong force is not enough to compensate for the high-energy state that the neutrons must occupy.

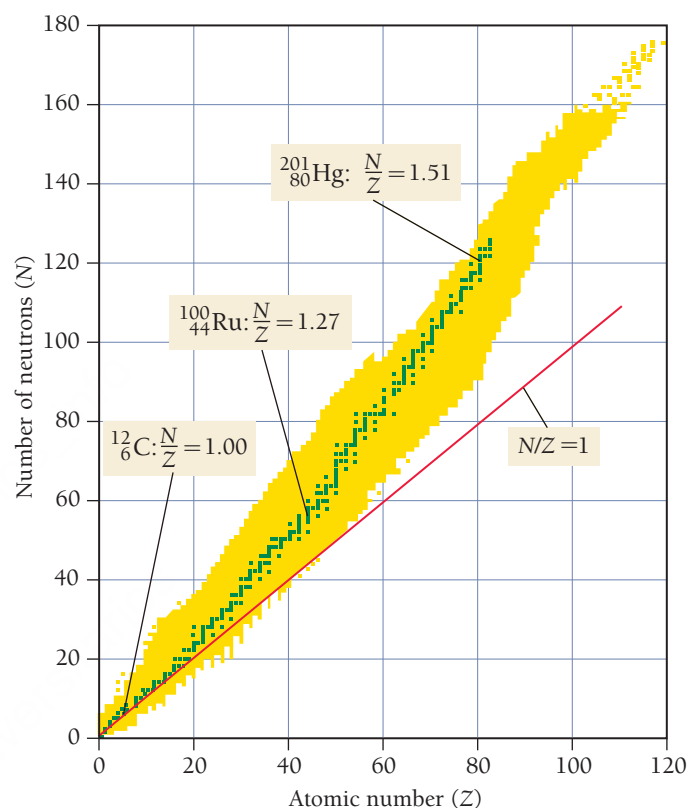
An important number in determining nuclear stability is the *ratio* of neutrons to protons (N/Z). **Figure 20.5** shows a plot of the number of neutrons versus the number of protons for all known nuclei. The yellow dots represent unstable nuclei and the green dots represent stable nuclei. The region of the graph with the green dots (stable nuclei) is known as the *valley* (or *island*) of *stability*. Notice that for the lighter elements, the N/Z ratio of stable nuclei is about 1 (equal numbers of neutrons and protons). For example, the most abundant isotope of carbon ($Z = 6$) is carbon-12, which contains six protons and six neutrons. However, beyond about $Z = 20$, the N/Z ratio of stable nuclei begins to get larger. For example, at $Z = 44$, stable nuclei have an N/Z ratio of about 1.27 and at $Z = 80$, the N/Z ratio reaches about 1.5. Above $Z = 83$, stable nuclei do not exist—bismuth ($Z = 83$) is the heaviest element with stable (nonradioactive) isotopes.

The type of radioactivity emitted by a nuclide depends in part on the N/Z ratio.

N/Z too high: Nuclides that lie above the valley of stability have too many neutrons and tend to convert neutrons to protons via beta decay. The process of undergoing beta decay moves the nuclide down in the plot in Figure 20.5 and closer to (or into) the valley of stability.

N/Z too low: Nuclides that lie below the valley of stability have too many protons and tend to convert protons to neutrons via positron emission or electron capture. This moves the nuclide up in the plot in Figure 20.5 and closer to (or into) the valley of stability.

One way to decide whether a particular nuclide has an N/Z that is too high, too low, or about right is to consult Figure 20.5. Those nuclides that lie within the valley of stability are stable. Alternatively, we can also compare the mass number of the nuclide to the atomic mass listed in the periodic table for the corresponding element. The atomic mass is an average of the masses of the most stable nuclides for an element (which is why they occur naturally) and thus represents an N/Z that is about right. For example, suppose we want to evaluate N/Z for Ru-112. Ruthenium has an atomic mass of 101.07, so we know that the nuclide with a mass number of 112 must contain too many neutrons and therefore its N/Z is too high. Example 20.3 demonstrates how to apply these considerations in predicting the mode of decay for a nucleus.



▲ FIGURE 20.5 Stable and Unstable Nuclei A plot of N (the number of neutrons) versus Z (the number of protons) for all known nuclei. The green dots represent stable nuclei, and the yellow dots represent unstable nuclei. An unstable nucleus with an N/Z ratio that is too high tends to undergo beta decay. An unstable nucleus with an N/Z ratio that is too low tends to undergo positron emission or electron capture.

EXAMPLE 20.3

Predicting the Type of Radioactive Decay

Predict whether each nuclide is more likely to decay via beta decay or positron emission.

- (a) Mg-28 (b) Mg-22 (c) Mo-102

SOLUTION

- (a) Magnesium-28 has 16 neutrons and 12 protons, so $N/Z = 1.33$. However, for $Z = 12$, you can see from Figure 20.5 that stable nuclei should have an N/Z of about 1. Alternatively, you can see from the periodic table that the atomic mass of magnesium is 24.31. Therefore, a nuclide with a mass number of 28 is too heavy to be stable because the N/Z ratio is too high, so Mg-28 undergoes *beta decay*, resulting in the conversion of a neutron to a proton.
- (b) Magnesium-22 has 10 neutrons and 12 protons, so $N/Z = 0.83$ (too low). Alternatively, you can see from the periodic table that the atomic mass of magnesium is 24.31. A nuclide with a mass number of 22 is too light; the N/Z ratio is too low. Therefore, Mg-22 undergoes *positron emission*, resulting in the conversion of a proton to a neutron. (Electron capture would accomplish the same thing as positron emission, but in Mg-22, positron emission is the only decay mode observed.)
- (c) Molybdenum-102 has 60 neutrons and 42 protons, so $N/Z = 1.43$. For $Z = 42$, you can see from Figure 20.5 that stable nuclei should have an N/Z ratio of about 1.3. Alternatively, you can see from the periodic table that the atomic mass of molybdenum is 95.94. A nuclide with a mass number of 102 is too heavy to be stable; the N/Z ratio is too high. Therefore, Mo-102 undergoes *beta decay*, resulting in the conversion of a neutron to a proton.

FOR PRACTICE 20.3

Predict whether each nuclide is more likely to decay via beta decay or positron emission.

- (a) Pb-192 (b) Pb-212 (c) Xe-114

TABLE 20.2 Number of Stable Nuclides with Even and Odd Numbers of Nucleons

Z	N	Number of Nuclides
Even	Even	157
Even	Odd	53
Odd	Even	50
Odd	Odd	5

Magic Numbers

In addition to the N/Z ratio, the *actual number* of protons and neutrons also affects the stability of the nucleus. Table 20.2 shows the number of nuclei with different possible combinations of even or odd nucleons. Notice that a large number of stable nuclides have both an even number of protons and an even number of neutrons. Only five stable nuclides have an odd number of protons and an odd number of neutrons.

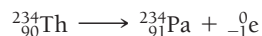
The reason for this is related to how nucleons occupy energy levels within the nucleus. Just as atoms with certain numbers of electrons are uniquely stable (in particular, the number of electrons associated with the noble gases: 2, 10, 18, 36, 54, etc.), so nuclei with certain numbers of nucleons (N or $Z = 2, 8, 20, 28, 50, 82$, and $N = 126$), are uniquely stable. These numbers are often referred to as **magic numbers**. Nuclei containing a magic number of protons or neutrons are particularly stable. Note that the magic numbers are even; this accounts in part for the abundance of stable nuclides with even numbers of nucleons. Moreover, nucleons also have a tendency to pair together (much as electrons pair). This tendency and the resulting stability of paired nucleons also contribute to the abundance of stable nuclides with even numbers of nucleons.

Radioactive Decay Series

Atoms with $Z > 83$ are radioactive and decay in one or more steps involving primarily alpha and beta decay (with some gamma decay to carry away excess energy). For example, uranium (atomic number 92) is the heaviest naturally occurring element. Its most common isotope is U-238, an alpha emitter that decays to Th-234.



The daughter nuclide, Th-234, is itself radioactive—it is a beta emitter that decays to Pa-234.



Protactinium-234 is also radioactive, decaying to U-234 via beta emission. Radioactive decay continues until a stable nuclide, Pb-206, is reached. **Figure 20.6** illustrates the entire uranium-238 decay series.

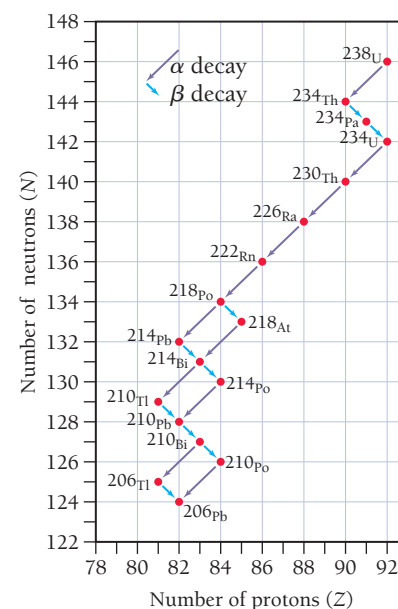
20.5 Detecting Radioactivity

The particles emitted by radioactive nuclei are highly energetic and can therefore be readily detected. A *radiation detector* detects particles through their interactions with atoms or molecules. The most common radiation detectors are **thermoluminescent dosimeters** (**Figure 20.7** ▼), which are issued to people working with or near radioactive substances. These dosimeters contain crystals that are excited by the ionizing radiation. The excited electrons are trapped by impurities that are intentionally introduced into the crystals. When the crystals are heated, the electrons relax to their ground state, emitting light. The amount of light emitted is proportional to the radiation exposure. These dosimeters are collected and processed regularly as a way to monitor a person's exposure. We discuss the effects and measurement of exposure in more detail in Section 20.11.

Radioactivity can be instantly detected with devices such as a **Geiger-Müller counter** (**Figure 20.8** ▼). In this instrument (commonly referred to as a Geiger counter), particles emitted by radioactive nuclei pass through an argon-filled chamber. The energetic particles create a trail of ionized argon atoms. High voltage applied between a wire within the chamber and the chamber itself causes these newly formed ions to produce an electrical signal that is displayed on a meter or turned into an audible click. Each click corresponds to a radioactive particle passing through the argon gas chamber. This clicking is the stereotypical sound most people associate with a radiation detector.

A second type of device commonly used to detect radiation instantly is a **scintillation counter**. In a scintillation counter, radioactive emissions pass through a material (such as NaI or CsI) that emits ultraviolet or visible light in response to excitation. The emitted light is turned into an electrical signal that is amplified and read on a meter.

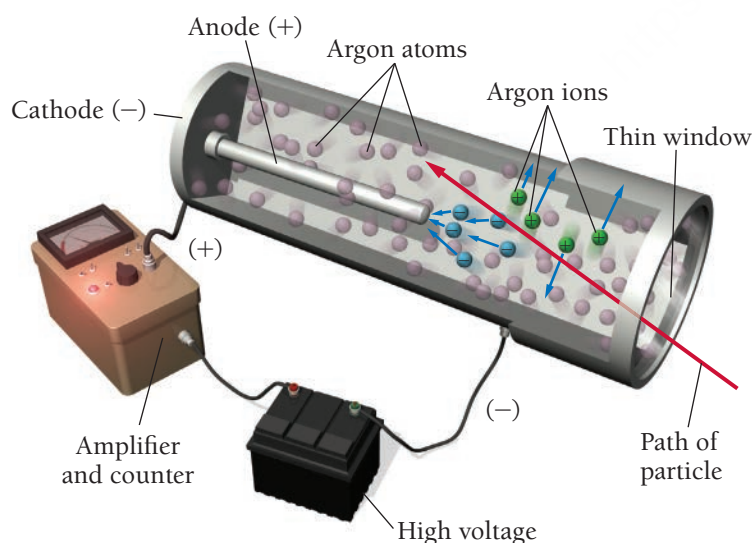
A Decay Series



▲ **FIGURE 20.6 The Uranium-238 Radioactive Decay Series**

Uranium-238 decays via a series of steps ending in Pb-206, a stable element. Each diagonal line to the left represents an alpha decay, and each diagonal line to the right represents a beta decay.

◀ **FIGURE 20.7 Thermoluminescent Dosimeter** A thermoluminescent dosimeter contains crystals that when heated emit light in proportion to radiation exposure.



▲ **FIGURE 20.8 Geiger-Müller Counter** When ionizing radiation passes through the argon-filled chamber, it ionizes the argon atoms, giving rise to a brief, tiny pulse of electrical current that is transduced onto a meter or into an audible click.

20.6 The Kinetics of Radioactive Decay and Radiometric Dating

Radioactivity is a natural component of our environment. The ground beneath you most likely contains radioactive atoms that emit radiation. The food you eat contains a residual quantity of radioactive atoms that are absorbed into your body fluids and incorporated into tissues. Small amounts of radiation from space make it through the atmosphere to constantly bombard Earth. Humans and other living organisms have evolved in this environment and have adapted to survive in it.

One reason for the radioactivity in our environment is the instability of all atomic nuclei beyond atomic number 83 (bismuth). Every element with more than 83 protons in its nucleus is unstable and therefore radioactive. In addition, some isotopes of elements with fewer than 83 protons are also unstable and radioactive. Radioactive nuclides *persist* in our environment because new ones are constantly being formed and because many of the existing ones decay only very slowly.

All radioactive nuclei decay via first-order kinetics, so the rate of decay in a particular sample is directly proportional to the number of nuclei present as indicated in this equation:

rate = kN

where N is the number of radioactive nuclei and k is the rate constant. Different radioactive nuclides decay into their daughter nuclides with different rate constants. Some nuclides decay quickly (large rate constant), while others decay slowly (small rate constant).

The time it takes for one-half of the parent nuclides in a radioactive sample to decay to the daughter nuclides is the *half-life* and is identical to the concept of half-life for chemical reactions that we discussed in Chapter 14. Thus, the relationship between the half-life of a nuclide and its rate constant is given by the same expression that we derived for a first-order reaction in Section 14.5:

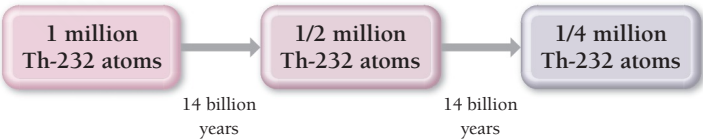
t_{1/2} = \frac{0.693}{k} [20.1]

Nuclides that decay quickly have short half-lives and large rate constants—they are considered very active (many decay events per unit time). Nuclides that decay slowly have long half-lives and are less active (fewer decay events per unit time).

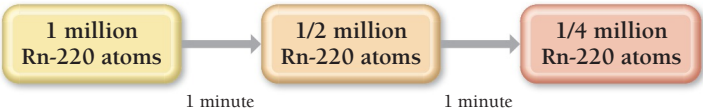
For example, thorium-232 is an alpha emitter with a half-life of 1.4 × 10¹⁰ years, or 14 billion years, so it is not particularly active. A sample of Th-232 containing 1 million atoms decays to ½ million atoms in 14 billion years and then to ¼ million in another 14 billion years and so on. Notice that a radioactive sample does *not* decay to *zero* atoms in two half-lives—we can't add two half-lives together to get a “whole” life. The amount that remains after one half-life is always one-half of what was present at the start. The amount that remains after two half-lives is one-quarter of what was present at the start, and so on.

TABLE 20.3 Selected Nuclides and Their Half-Lives

Nuclide	Half-Life	Type of Decay
²³² ₉₀ Th	1.4 × 10 ¹⁰ yr	alpha
²³⁸ ₉₂ U	4.5 × 10 ⁹ yr	alpha
¹⁴ ₆ C	5715 yr	beta
²²⁰ ₈₆ Rn	55.6 s	alpha
²¹⁹ ₉₀ Th	1.05 × 10 ⁻⁶ s	alpha

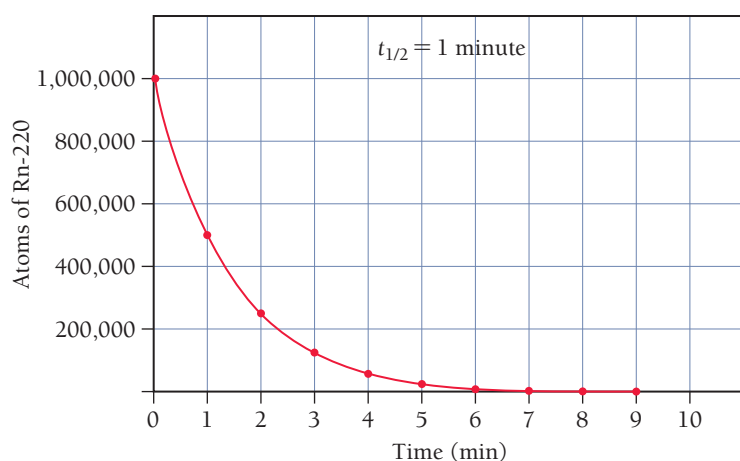


Some nuclides have very short half-lives. For example, radon-220 has a half-life of approximately 1 minute (Figure 20.9 ►). A 1-million-atom sample of radon-220 decays to ½ million radon-220 atoms in just 2 minutes and to approximately 1000 atoms in 10 minutes. Table 20.3 lists several nuclides and their half-lives.



You may find it useful to review the discussion of first-order kinetics in Section 14.4.

Decay of Radon-220



◀ **FIGURE 20.9 The Decay of Radon-220**

Radon-220 decays with a half-life of approximately 1 minute.

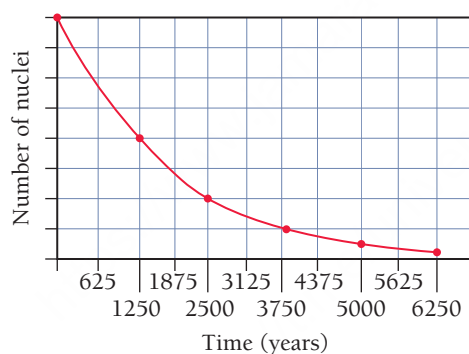
Half-Life

20.2
Cc

Conceptual
Connection



This graph represents the decay of a radioactive nuclide.



What is the half-life of the nuclide in the graph?

- (a) 625 years (b) 1250 years (c) 2500 years (d) 3125 years

The Integrated Rate Law

Recall from Chapter 14 that for first-order chemical reactions, the concentration of a reactant as a function of time is given by the integrated rate law.

$$\ln \frac{[A]_t}{[A]_0} = -kt \quad [20.2]$$

Because nuclear decay follows first-order kinetics, we can substitute the number of nuclei for concentration to arrive at the equation:

$$\ln \frac{N_t}{N_0} = -kt \quad [20.3]$$

where N_t is the number of radioactive nuclei at time t and N_0 is the initial number of radioactive nuclei. Example 20.4 demonstrates the use of this equation.

EXAMPLE 20.4

Radioactive Decay Kinetics

Interactive
Worked Example
Video 20.4PEARSON
eText
2.0

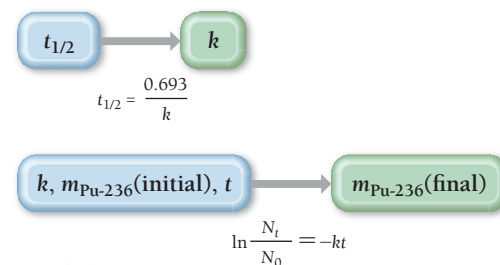
Plutonium-236 is an alpha emitter with a half-life of 2.86 years. If a sample initially contains 1.35 mg of Pu-236, what mass of Pu-236 is present after 5.00 years?

SORT You are given the initial mass of Pu-236 in a sample and asked to find the mass after 5.00 years.

GIVEN: $m_{\text{Pu-236}}(\text{initial}) = 1.35 \text{ mg}$;
 $t = 5.00 \text{ yr}$; $t_{1/2} = 2.86 \text{ yr}$
FIND: $m_{\text{Pu-236}}(\text{final})$

STRATEGIZE Use the integrated rate law (Equation 20.3) to solve this problem. You can determine the value of the rate constant (k) from the half-life expression (Equation 20.1).

CONCEPTUAL PLAN



Use the value of the rate constant, the initial mass of Pu-236, and the time along with integrated rate law to find the final mass of Pu-236. Since the mass of the Pu-236 ($m_{\text{Pu-236}}$) is directly proportional to the number of atoms (N), and since the integrated rate law contains the ratio (N_t/N_0), you can substitute the initial and final masses.

SOLVE Follow the conceptual plan. Begin by determining the rate constant from the half-life.

SOLUTION

$$t_{1/2} = \frac{0.693}{k}$$

$$k = \frac{0.693}{t_{1/2}} = \frac{0.693}{2.86 \text{ yr}}$$

$$= 0.2423/\text{yr}$$

Solve the integrated rate law for N_t and substitute the values of the rate constant, the initial mass of Pu-236, and the time into the solved equation. Calculate the final mass of Pu-236.

$$\ln \frac{N_t}{N_0} = -kt$$

$$\frac{N_t}{N_0} = e^{-kt}$$

$$N_t = N_0 e^{-kt}$$

$$N_t = 1.35 \text{ mg} [e^{-(0.2423/\text{yr})(5.00 \text{ yr})}]$$

$$N_t = 0.402 \text{ mg}$$

CHECK The units of the answer (mg) are correct. The magnitude of the answer (0.402 mg) is about one-third of the original mass (1.35 mg), which seems reasonable given that the amount of time is between one and two half-lives. (One half-life would result in one-half of the original mass, and two half-lives would result in one-fourth of the original mass.)

FOR PRACTICE 20.4

How long will it take for the 1.35 mg sample of Pu-236 in Example 20.4 to decay to 0.100 mg?

Because radioactivity is a first-order process, the rate of decay is linearly proportional to the number of nuclei in the sample. Therefore, we can use the initial rate of decay (rate_0) and the rate of decay at time t (rate_t) in the integrated rate law.

$$\text{rate}_t = kN_t \quad \text{rate}_0 = kN_0$$

$$\frac{N_t}{N_0} = \frac{\text{rate}_t/k}{\text{rate}_0/k} = \frac{\text{rate}_t}{\text{rate}_0}$$

Substituting into Equation 20.3, we get the following result:

$$\ln \frac{\text{rate}_t}{\text{rate}_0} = -kt \quad [20.4]$$

We can use Equation 20.4 to predict how the rate of decay of a radioactive sample will change with time or how much time has passed based on how the rate has changed (see Examples 20.5 and 20.6 later in this section).

The radioactive isotopes in our environment and their predictable decay with time can therefore be used to estimate the age of rocks or artifacts containing those isotopes. The technique is known as **radiometric dating**, and here we examine two different types individually.

Half-Life and the Amount of Radioactive Sample

A sample initially contains 1.6 moles of a radioactive isotope. How much of the sample remains after four half-lives?

- (a) 0.0 mol (b) 0.10 mol (c) 0.20 mol (d) 0.40 mol

20.3

Cc

Conceptual
Connection



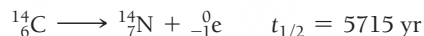
Radiocarbon Dating

Archaeologists, geologists, anthropologists, and other scientists use **radiocarbon dating**, a technique devised in 1949 by Willard Libby (1908–1980) at the University of Chicago, to estimate the ages of fossils and artifacts. For example, in 1947, young shepherds searching for a stray goat near the Dead Sea (east of Jerusalem) entered a cave and discovered ancient scrolls that had been stuffed into jars. These scrolls—now named the Dead Sea Scrolls—are 2000-year-old texts of the Hebrew Bible, predating other previously discovered manuscripts by almost a thousand years.

The Dead Sea Scrolls, like other ancient artifacts, contain a radioactive signature that reveals their age. This signature results from the presence of carbon-14 (which is radioactive) in the environment. Carbon-14 is constantly formed in the upper atmosphere by the neutron bombardment of nitrogen.



After it forms, carbon-14 decays back to nitrogen by beta emission with a half-life of 5715 years.



The continuous formation of carbon-14 in the atmosphere and its continuous decay to nitrogen-14 produce a nearly constant equilibrium amount of atmospheric carbon-14. The atmospheric carbon-14 is oxidized to carbon dioxide and incorporated into plants by photosynthesis. The C-14 then makes its way up the food chain and ultimately into all living organisms. As a result, the tissues in all living plants, animals, and humans contain the same ratio of carbon-14 to carbon-12 (${}^{14}\text{C}:{}^{12}\text{C}$) as that found in the atmosphere. When a living organism dies, however, it stops incorporating new carbon-14 into its tissues. The ${}^{14}\text{C}:{}^{12}\text{C}$ ratio then begins to decrease with a half-life of 5715 years.

Since many artifacts, including the Dead Sea Scrolls, are made from materials that were once living—such as papyrus, wood, or other plant and animal derivatives—the ${}^{14}\text{C}:{}^{12}\text{C}$ ratio in these artifacts indicates their age. For example, suppose an ancient artifact has a ${}^{14}\text{C}:{}^{12}\text{C}$ ratio that is 25% of that found in living organisms. How old is the artifact? Since it contains one-quarter as much carbon-14 as a living organism, it must be two half-lives or 11,460 years old. The maximum age that we can estimate from carbon-14 dating is about 50,000 years—beyond that, the amount of carbon-14 becomes too low to measure accurately.

The accuracy of carbon-14 dating can be checked against objects whose ages are known from historical sources. These kinds of comparisons reveal that ages obtained from C-14 dating may deviate from the actual ages by up to about 5%. For a 6000-year-old object, that is a margin of error of about 300 years. The reason for the deviations is the variance of atmospheric C-14 levels over time.

In order to make C-14 dating more accurate, scientists have studied the carbon-14 content of western bristlecone pine trees, which can live up to 5000 years. Each tree trunk contains growth rings corresponding to each year of the tree's life, and the wood in each ring incorporates carbon derived from the carbon dioxide in the atmosphere at that time. The rings thus provide a record of the historical



▲ The Dead Sea Scrolls are 2000-year-old biblical manuscripts. Their age was determined by radiocarbon dating.

Libby received the Nobel Prize in 1960 for the development of radiocarbon dating.



▲ Some western bristlecone pine trees live up to 5000 years; scientists can precisely determine the age of a tree by counting the annual rings in its trunk. The trees can therefore be used to calibrate the time scale for radiocarbon dating.



atmospheric carbon-14 content. In addition, the rings of living trees can be correlated with the rings of dead trees (if part of the lifetimes of the trees overlapped), allowing the record to be extended back about 11,000 years. Using the data from the bristlecone pine, we can correct the 5% deviations from historical dates. In this way, the known ages of bristlecone pine trees are used to calibrate C-14 dating, resulting in more accurate results.

◀ Each tree ring represents a year of growth, and the wood in that ring is a living record of the amount of C-14 present in the atmosphere during that year.

EXAMPLE 20.5

Using Radiocarbon Dating to Estimate Age

Interactive
Worked Example
Video 20.5

PEARSON
eText
2.0

A skull believed to belong to an ancient human being has a carbon-14 decay rate of 4.50 disintegrations per minute per gram of carbon ($4.50 \text{ dis/min} \cdot \text{gC}$). If living organisms have a decay rate of $15.3 \text{ dis/min} \cdot \text{gC}$, how old is the skull? (The decay rate is directly proportional to the amount of carbon-14 present.)

SORT You are given the current rate of decay for the skull and the assumed initial rate. You are asked to determine the age of the skull, which is the time that must have passed in order for the rate to have reached its current value.

STRATEGIZE Use the expression for half-life (Equation 20.1) to find the rate constant (k) from the half-life for C-14, which is 5715 yr (Table 20.3).

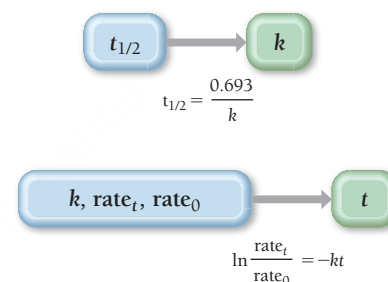
Use the value of the rate constant and the initial and current rates to find t from the integrated rate law (Equation 20.4).

SOLVE Follow the conceptual plan. Begin by finding the rate constant from the half-life.

Substitute the rate constant and the initial and current rates into the integrated rate law and solve for t .

GIVEN: $\text{rate}_t = 4.50 \text{ dis/min} \cdot \text{gC}$;
 $\text{rate}_0 = 15.3 \text{ dis/min} \cdot \text{gC}$;
FIND: t

CONCEPTUAL PLAN



SOLUTION

$$t_{1/2} = \frac{0.693}{k}$$

$$k = \frac{0.693}{t_{1/2}} = \frac{0.693}{5715 \text{ yr}}$$

$$= 1.212 \times 10^{-4} / \text{yr}$$

$$\ln \frac{\text{rate}_t}{\text{rate}_0} = -kt$$

$$t = -\frac{\ln \frac{\text{rate}_t}{\text{rate}_0}}{k} = -\frac{\ln \frac{4.50 \text{ dis/min} \cdot \text{gC}}{15.3 \text{ dis/min} \cdot \text{gC}}}{1.212 \times 10^{-4} / \text{yr}}$$

$$= 1.0 \times 10^4 \text{ yr}$$

CHECK The units of the answer (yr) are correct. The magnitude of the answer is about 10,000 years, which is a little less than two half-lives. This value is reasonable given that two half-lives would result in a decay rate of about $3.8 \text{ dis/min} \cdot \text{gC}$.

FOR PRACTICE 20.5

A researcher claims that an ancient scroll originated from Greek scholars in about 500 B.C. A measure of its carbon-14 decay rate gives a value that is 89% of that found in living organisms. How old is the scroll, and could it be authentic?

Uranium/Lead Dating

Radiocarbon dating can only measure the ages of objects that were once living and that are relatively young (<50,000 years). Other radiometric dating techniques can measure the ages of prehistoric objects that were never alive. The most dependable technique relies on the ratio of uranium-238 to lead-206 within igneous rocks (rocks of volcanic origin). This technique measures the time that has passed since the rock solidified (at which point the “radiometric clock” was reset).

Because U-238 decays into Pb-206 with a half-life of 4.5×10^9 years, the relative amounts of U-238 and Pb-206 in a uranium-containing rock reveal its age. For example, if a rock originally contained U-238 and currently contains equal amounts of U-238 and Pb-206, the rock is 4.5 billion years old, assuming that it did not contain any Pb-206 when it was formed. The latter assumption can be tested because the lead that results from the decay of uranium has a different isotopic composition than the lead that is deposited in rocks at the time of their formation. Example 20.6 shows how we can use the relative amounts of Pb-206 and U-238 in a rock to estimate its age.

EXAMPLE 20.6

Using Uranium/Lead Dating to Estimate Age

A meteor contains 0.556 g of Pb-206 to every 1.00 g of U-238. Assuming that the meteor did not contain any Pb-206 at the time of its formation, determine the age of the meteor. Uranium-238 decays to lead-206 with a half-life of 4.5 billion years.	
SORT You are given the current masses of Pb-206 and U-238 in a rock and asked to find its age. You are also given the half-life of U-238.	GIVEN: $m_{\text{U-238}} = 1.00 \text{ g}$; $m_{\text{Pb-206}} = 0.556 \text{ g}$; $t_{1/2} = 4.5 \times 10^9 \text{ yr}$ FIND: t
STRATEGIZE Use the integrated rate law (Equation 20.3) to solve this problem. To do so, you must first determine the value of the rate constant (k) from the half-life expression (Equation 20.1). Before substituting into the integrated rate law, you need the ratio of the current amount of U-238 to the original amount (N_t/N_0). The current mass of uranium is 1.00 g. The initial mass includes the current mass (1.00 g) plus the mass that has decayed into lead-206, which you can determine from the current mass of Pb-206. Use the value of the rate constant and the initial and current amounts of U-238 along with the integrated rate law to find t .	CONCEPTUAL PLAN <pre>graph LR A["t1/2"] --> B["k"] A --- C["t1/2 = 0.693 / k"] D["g Pb-206"] --> E["mol Pb-206"] E --- F["1 mol Pb / 206 g Pb"] E --> G["mol U-238"] G --- H["1 mol U / 1 mol Pb"] G --> I["g U-238"] I --- J["238 g U / 1 mol U"] K["k, Nt, N0"] --> L["t"] K --- M["ln(Nt/N0) = -kt"]</pre>
SOLVE Follow your plan. Begin by finding the rate constant from the half-life.	SOLUTION $t_{1/2} = \frac{0.693}{k}$ $k = \frac{0.693}{t_{1/2}} = \frac{0.693}{4.5 \times 10^9 \text{ yr}}$ $= 1.54 \times 10^{-10} / \text{yr}$

—Continued on the next page

Continued from the previous page—

Determine the mass in grams of U-238 required to form the given mass of Pb-206.	$0.556 \text{ g Pb-206} \times \frac{1 \text{ mol Pb-206}}{206 \text{ g Pb-206}} \times \frac{1 \text{ mol U-238}}{1 \text{ mol Pb-206}} \times \frac{238 \text{ g U-238}}{1 \text{ mol U-238}} = 0.6424 \text{ g U-238}$
Substitute the rate constant and the initial and current masses of U-238 into the integrated rate law and solve for t . (The initial mass of U-238 is the sum of the current mass and the mass that is required to form the given mass of Pb-206.)	$\ln \frac{N_t}{N_0} = -kt$ $t = \frac{\ln \frac{N_t}{N_0}}{k} = -\frac{\ln \frac{1.00 \text{ g}}{1.00 \text{ g} + 0.6424 \text{ g}}}{1.54 \times 10^{-10} / \text{yr}}$ $= 3.2 \times 10^9 \text{ yr}$
CHECK The units of the answer (yr) are correct. The magnitude of the answer is about 3.2 billion years, which is less than one half-life. This value is reasonable given that less than half of the uranium in the meteor has decayed into lead.	
FOR PRACTICE 20.6 A rock contains a Pb-206 to U-238 mass ratio of 0.145:1.00. Assuming that the rock did not contain any Pb-206 at the time of its formation, determine its age.	

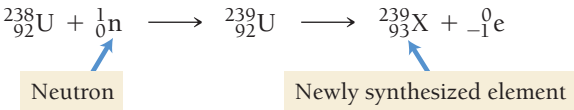
The age of the universe is estimated from its expansion rate, which is measured by examining changes in the wavelength of light from distant galaxies.

The uranium/lead radiometric dating technique and other radiometric dating techniques (such as the decay of potassium-40 to argon-40) have been widely used to measure the ages of rocks on Earth and have produced highly consistent results. Rocks with ages greater than 3.5 billion years have been found on every continent. The oldest rocks have an age of approximately 4.0 billion years, establishing a lower limit for Earth's age (Earth must be at least as old as its oldest rocks). The ages of about 70 meteorites that have struck Earth have also been extensively studied and have been found to be about 4.5 billion years old. Since the meteorites were formed at the same time as our solar system (which includes Earth), the best estimate for Earth's age is about 4.5 billion years. That age is consistent with the estimated age of our universe—about 13.7 billion years.

20.7 The Discovery of Fission: The Atomic Bomb and Nuclear Power

The element with atomic number 100 is named fermium in honor of Enrico Fermi.

In the mid-1930s, Enrico Fermi (1901–1954), an Italian physicist, attempted to synthesize a new element by bombarding uranium—the heaviest known element at that time—with neutrons. Fermi speculated that if a neutron could be incorporated into the nucleus of a uranium atom, the nucleus might undergo beta decay, converting a neutron into a proton. If that happened, a new element, with atomic number 93, would be synthesized for the first time. The nuclear equation for the process is shown here:

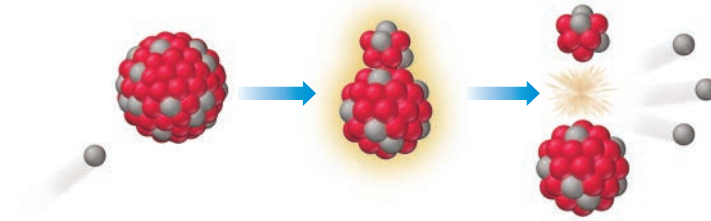
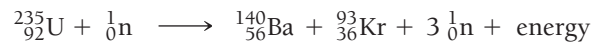


The element with atomic number 109 is named meitnerium in honor of Lise Meitner.

Fermi performed the experiment and detected the emission of beta particles. However, his results were inconclusive. Had he synthesized a new element? Fermi never chemically examined the products to determine their composition and therefore could not say with certainty that he had.

Three researchers in Germany—Lise Meitner (1878–1968), Fritz Strassmann (1902–1980), and Otto Hahn (1879–1968)—repeated Fermi's experiments and performed careful chemical analysis of the products. What they found in the products—several elements *lighter* than uranium—changed the world forever. On January 6, 1939, Meitner, Strassmann, and Hahn reported that the neutron bombardment of uranium resulted in **nuclear fission**—the splitting of the uranium atom. The nucleus of the neutron-bombarded uranium atom had been split into barium, krypton, and other smaller products. They also determined that the process emits enormous amounts of energy.

A nuclear equation for a fission reaction, showing how uranium breaks apart into the daughter nuclides, is shown here:

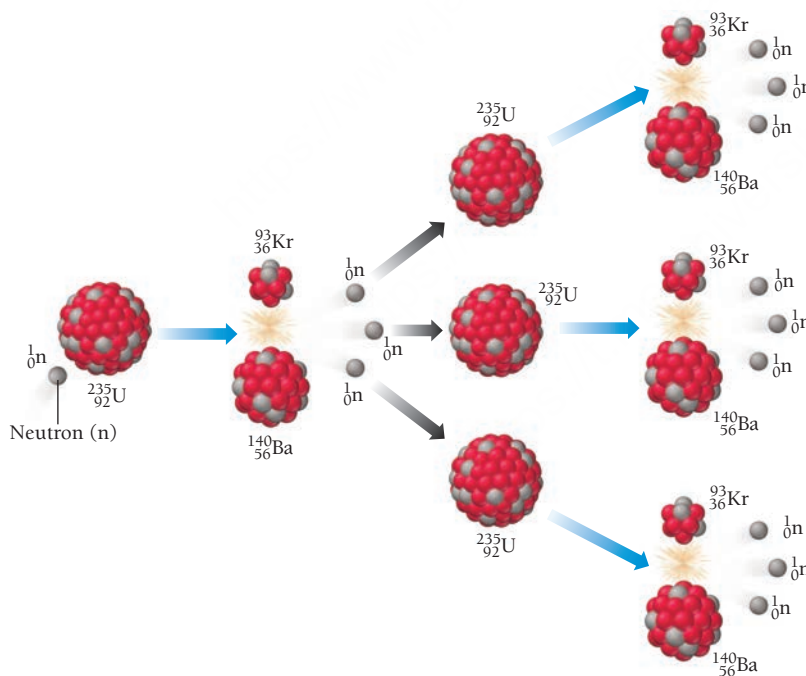


Notice that the initial uranium atom is the U-235 isotope, which constitutes less than 1% of all naturally occurring uranium. U-238, the most abundant uranium isotope, does not undergo fission. Notice also that the process produces three neutrons, which have the potential to initiate fission in three other U-235 atoms.

The Atomic Bomb

Scientists quickly realized that a sample rich in U-235 can undergo a **chain reaction** in which neutrons produced by the fission of one uranium nucleus induce fission in other uranium nuclei (**Figure 20.10 ▼**). This self-amplifying reaction is capable of producing an enormous amount of energy. This is the energy that is harnessed in an atomic bomb. However, to make a bomb, a **critical mass** of U-235—enough U-235 to produce a self-sustaining reaction—is necessary.

Fission Chain Reaction



▲ **FIGURE 20.10 A Self-Amplifying Chain Reaction** The fission of one U-235 nucleus emits neutrons that can then initiate fission in other U-235 nuclei, resulting in a chain reaction that releases enormous amounts of energy.

Fearing that Nazi Germany would develop such a bomb, several U.S. scientists persuaded Albert Einstein (1879–1955), the most famous scientist of the time, to write a letter to President Franklin Roosevelt in 1939 warning of this possibility. Einstein wrote, “. . . and it is conceivable—though much less certain—that extremely powerful bombs of a new type may thus be constructed. A single bomb of this type, carried by boat and exploded in a port, might very well destroy the whole port together with some of the surrounding territory.”



▲ This photograph is of Lise Meitner in Otto Hahn's Berlin laboratory. Together with Hahn and Fritz Strassmann, Meitner determined that U-235 could undergo nuclear fission.



▲ On July 16, 1945, in the New Mexico desert, the world's first atomic bomb was detonated. It had the power of 18,000 tons of dynamite.

► Einstein's letter (part of which is shown here) helped persuade Franklin Roosevelt to fund research for the building of a fission bomb.

Einstein's letter convinced Roosevelt, and in 1941 the president assembled the resources to begin the costliest scientific project ever attempted. The top-secret endeavor was called the *Manhattan Project*, and its main goal was to build an atomic bomb before the Germans did. Physicist J. R. Oppenheimer (1904–1967) led the project at a high-security research facility in Los Alamos, New Mexico. Four years later, Oppenheimer's group successfully detonated the world's first nuclear weapon at a test site in New Mexico. The first atomic bomb exploded with a force equivalent to 18,000 tons of dynamite. The Germans—who had *not* made a successful nuclear bomb—had already been defeated by this time. Instead, the United States used the atomic bomb on Japan, dropping one bomb on Hiroshima and a second on Nagasaki. Together, the bombs killed approximately 200,000 people and led to Japan's surrender.

Albert Einstein
Old Grove Rd.
Massau Point
Peconic, Long Island

August 2nd, 1939

F.D. Roosevelt,
President of the United States,
White House
Washington, D.C.

Sir:

Some recent work by E. Fermi and L. Szilard, which has been communicated to me in manuscript, leads me to expect that the element uranium may be turned into a new and important source of energy in the immediate future. Certain aspects of the situation which has arisen seem to call for watchfulness and, if necessary, quick action on the part of the Administration. I believe therefore that it is my duty to bring to your attention the following facts and recommendations:

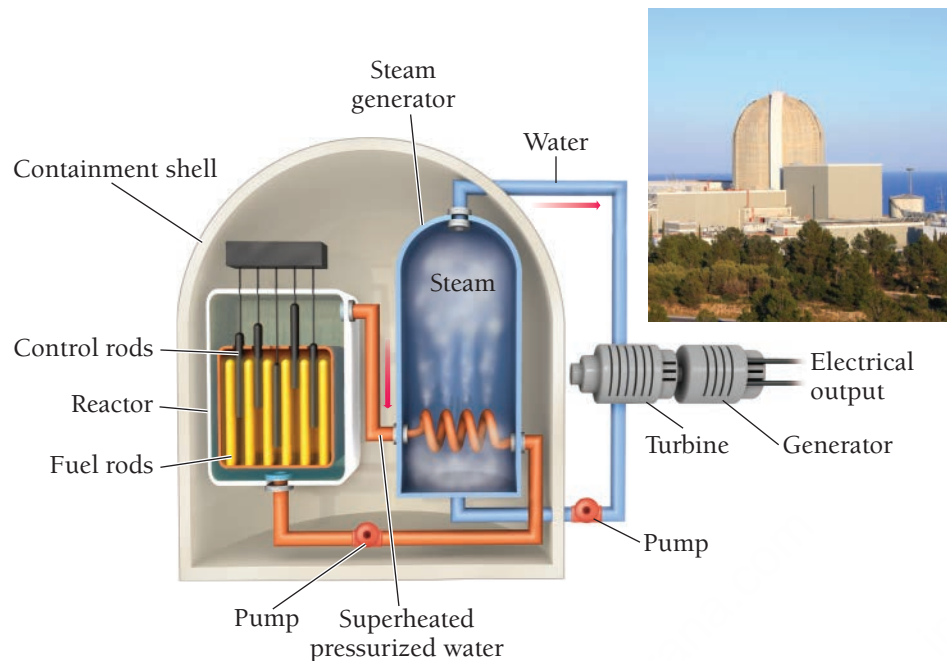
In the course of the last four months it has been made probable - through the work of Joliot in France as well as Fermi and Szilard in America - that it may become possible to set up a nuclear chain reaction in a large mass of uranium, by which vast amounts of power and large quantities of new radium-like elements would be generated. Now it appears almost certain that this could be achieved in the immediate future.

This new phenomenon would also lead to the construction of bombs, and it is conceivable - though much less certain - that extremely powerful bombs of a new type may thus be constructed. A single bomb of this type, carried by boat and exploded in a port, might very well destroy the whole port together with some of the surrounding territory. However, such bombs might very well prove to be too heavy for transportation by air.

Nuclear Power: Using Fission to Generate Electricity

Nuclear reactions, such as fission, generate enormous amounts of energy. In a nuclear bomb, the energy is released all at once. The energy can also be released more slowly and used for peaceful purposes such as electricity generation. In the United States, nuclear fission generates about 20% of electricity. In some other countries, nuclear fission generates as much as 70% of electricity. To get an idea of the amount of energy released during fission, imagine a hypothetical nuclear-powered car. Suppose the fuel for such a car was a uranium cylinder about the size of a pencil. How often would you have to refuel the car? The energy content of the uranium cylinder is equivalent to about 1000 twenty-gallon tanks of gasoline. If you refuel your gasoline-powered car once a week, your nuclear-powered car could go 1000 weeks—almost 20 years—before refueling.

Nuclear Reactor



◀ **FIGURE 20.11 A Nuclear Reactor** The fission of U-235 in the core of a nuclear power plant generates heat that creates steam and turns a turbine on an electrical generator. Control rods are raised or lowered to control the fission reaction. (Note that the superheated water carrying heat away from the reactor core is contained within its own pipes and does not come into direct contact with the steam that drives the turbines.)

Similarly, a nuclear-powered electricity generation plant can produce a substantial amount of electricity from a small amount of fuel. Such plants exploit the heat created by fission, using it to boil water and make steam, which then turns the turbine on a generator to produce electricity (**Figure 20.11 ▲**). The fission reaction occurs in the nuclear core of the power plant. The core consists of uranium fuel rods—enriched to about 3.5% U-235—interspersed between retractable neutron-absorbing control rods. When the control rods are fully retracted from the fuel rod assembly, the chain reaction can occur. When the control rods are fully inserted into the fuel assembly, however, they absorb the neutrons that would otherwise induce fission, shutting down the chain reaction. By retracting or inserting the control rods, the operator can increase or decrease the rate of fission. In this way, the fission reaction is controlled to produce the right amount of heat needed for electricity generation. In case of a power failure, the control rods automatically drop into the fuel rod assembly, shutting down the fission reaction.

A typical nuclear power plant generates enough electricity for a city of about 1 million people and uses about 50 kg of fuel per day. In contrast, a coal-burning power plant uses about 2,000,000 kg of fuel to generate the same amount of electricity. Furthermore, a nuclear power plant generates no air pollution and no greenhouse gases. A coal-burning power plant emits pollutants such as carbon monoxide, nitrogen oxides, and sulfur oxides. Coal-burning power plants also emit carbon dioxide, a greenhouse gas.

Nuclear power generation, however, is not without problems. Foremost among them is the danger of nuclear accidents. In spite of safety precautions, the fission reaction occurring in a nuclear power plant can overheat. The most famous examples of this overheating occurred in Chernobyl, in the former Soviet Union, on April 26, 1986, and at the Fukushima Daiichi Nuclear Power Plant in Japan in March of 2011.

In the Chernobyl incident, operators of the plant were performing an experiment designed to reduce maintenance costs. In order to perform the experiment, they had to disable many of the safety features of the reactor core. The experiment failed with disastrous results. The nuclear core, composed partly of graphite, overheated and began to burn. The accident caused 31 immediate deaths and produced a fire that scattered radioactive debris into the atmosphere, making much of the surrounding land (within about a 32-kilometer radius) uninhabitable. As bad as the accident was, however, it was not a nuclear detonation. A nuclear power plant *cannot* become a nuclear bomb. The uranium fuel used in electricity generation is not sufficiently enriched in U-235 to produce a nuclear detonation. U.S. nuclear power plants have additional safety features designed to prevent similar accidents. For example, U.S. nuclear power plants have large containment structures to contain radioactive debris in the event of an accident.

Reactor cores in the United States are not made of graphite and cannot burn in the way that the Chernobyl core did.



▲ In 2011, the Fukushima Daiichi Nuclear Power Plant in Japan overheated as a result of a 9.0 magnitude earthquake that triggered a tsunami that flooded the coastal plant and caused the cooling system pumps to fail.

In the 2011 Japanese accident, a 9.0 magnitude earthquake triggered a tsunami that flooded the coastal plant and caused the cooling system pumps to fail. Three of the nuclear cores within the plant dramatically overheated and experienced a partial meltdown (in which the fuel becomes so hot that it melts). The accident was intensified by the loss of water in the fuel storage ponds (pools of water normally used to keep spent fuel cool), which caused the fuel stored in the ponds to also overheat. The release of radiation into the environment, however, while significant, was much lower in Japan than at Chernobyl. In fact, no radioactivity-related deaths were reported at the Fukushima plant or the surrounding area. The cleanup of the site, however, will continue for many years.

A second problem associated with nuclear power is waste disposal. Although the amount of nuclear fuel used in electricity generation is small compared to other fuels, the products of the reaction are radioactive and have long half-lives. What do we do with this waste? Currently, in the United States, nuclear waste is stored on site at the nuclear power plants. A single permanent disposal site was being developed in Yucca Mountain, Nevada, to store U.S. waste. However, in the spring of 2010, the Obama administration halted the development of this project and formed the Blue Ribbon Commission on America’s Nuclear Future to explore alternatives. In 2012, the committee submitted its final report. Among the recommendations was the immediate development of new disposal and consolidated storage facilities. However, actual locations for such facilities were not part of the recommendations.

20.8 Converting Mass to Energy: Mass Defect and Nuclear Binding Energy

Nuclear fission produces large amounts of energy. But where does the energy come from? The energy comes from the conversion of mass to energy, as described by Einstein’s famous equation $E = mc^2$. Here we first look at the conversion of mass to energy in general; then we turn to the topics of mass defect and nuclear binding energy.

The Conversion of Mass to Energy

When a fission reaction occurs, the products have a slightly different mass than the reactants. For example, examine the masses of the reactants and products in the fission equation from Section 20.7:

$^{235}_{92}\text{U} + {}^1_0\text{n} \longrightarrow {}^{140}_{56}\text{Ba} + {}^{93}_{36}\text{Kr} + 3{}^1_0\text{n}$

Mass Reactants		Mass Products	
$^{235}_{92}\text{U}$	235.04392 amu	$^{140}_{56}\text{Ba}$	139.910581 amu
${}^1_0\text{n}$	1.00866 amu	$^{93}_{36}\text{Kr}$	92.931130 amu
		$3{}^1_0\text{n}$	3(1.00866) amu
Total	236.05258 amu		235.86769 amu

In a chemical reaction, there are also mass changes associated with the emission or absorption of energy. Because the energy involved in chemical reactions is so much smaller than that of nuclear reactions, however, these mass changes are negligible.

The products of the nuclear reaction have *less mass* than the reactants. The missing mass is converted to energy. In Chapter 1 we learned that matter is conserved in chemical reactions. In nuclear reactions matter can be converted to energy. The relationship between the amount of matter that is lost and the amount of energy formed is given by Einstein’s famous equation relating the two quantities:

$E = mc^2$

where E is the energy produced, m is the mass lost, and c is the speed of light. For example, in the fission reaction just shown, we calculate the quantity of energy produced as follows:

mass lost (m) = 236.05258 amu – 235.86769 amu
= 0.18489 amu $\times \frac{1.66054 \times 10^{-27} \text{ kg}}{1 \text{ amu}}$
energy produced (E) = mc^2
= $3.0702 \times 10^{-28} \text{ kg} (2.9979 \times 10^8 \text{ m/s})^2$
= $2.7593 \times 10^{-11} \text{ J}$

The result (2.7593×10^{-11} J) is the energy produced when one nucleus of U-235 undergoes fission. This may not seem like much energy, but it is only the energy produced by the fission of a *single* nucleus. If we calculate the energy produced *per mole* of U-235, we can compare it to a chemical reaction:

$$2.7593 \times 10^{-11} \frac{\text{J}}{\text{U-235 atom}} \times \frac{6.0221 \times 10^{23} \text{ U-235 atoms}}{1 \text{ mol U-235}} = 1.6617 \times 10^{13} \text{ J/mol U-235}$$

The energy produced by the fission of 1 mol of U-235 is about 17 billion kJ. In contrast, a highly exothermic chemical reaction produces 1000 kJ per mole of reactant. Fission produces over a million times more energy per mole than chemical processes.

Mass Defect and Nuclear Binding Energy

We can examine the formation of a stable nucleus from its component particles as a nuclear reaction in which mass is converted to energy. For example, consider the formation of helium-4 from its components:

$2^1_1\text{H} + {}^1_0\text{n}$		\longrightarrow	${}^4_2\text{He}$	
Mass Reactants			Mass Products	
2^1_1H	2(1.00783) amu		${}^4_2\text{He}$	4.00260 amu
2^1_0n	2(1.00866) amu			
Total	4.03298 amu			4.00260 amu

The electrons are contained on the left side in the 2^1_1H , and on the right side in ${}^4_2\text{He}$. If we write the equation using only two protons on the left (${}^1_1\text{p}$), we must also add two electrons to the left.

A helium-4 atom has less mass than the sum of the masses of its separate components. This difference in mass, known as the **mass defect**, exists in all stable nuclei. The energy corresponding to the mass defect—obtained by substituting the mass defect into the equation $E = mc^2$ —is the **nuclear binding energy**, the amount of energy required to break apart the nucleus into its component nucleons.

Although chemists often report energies in joules, nuclear physicists often use the electron volt (eV) or megaelectron volt (MeV): $1 \text{ MeV} = 1.602 \times 10^{-13} \text{ J}$. Unlike energy in joules, which is usually reported per mole, energy in electron volts is reported per nucleus. A particularly useful conversion for calculating and reporting nuclear binding energies is the relationship between amu (mass units) and MeV (energy units).

An electron volt is defined as the kinetic energy of an electron that has been accelerated through a potential difference of 1 V.

$$1 \text{ amu} = 931.5 \text{ MeV}$$

A mass defect of 1 amu, when substituted into the equation $E = mc^2$, gives an energy of 931.5 MeV. Using this conversion factor, we can calculate the binding energy of the helium nucleus:

$$\begin{aligned} \text{mass defect} &= 4.03298 \text{ amu} - 4.00260 \text{ amu} \\ &= 0.03038 \text{ amu} \\ \text{nuclear binding energy} &= 0.03038 \text{ amu} \times \frac{931.5 \text{ MeV}}{1 \text{ amu}} \\ &= 28.30 \text{ MeV} \end{aligned}$$

The binding energy of the helium nucleus is 28.30 MeV. In order to compare the binding energy of one nucleus to that of another, we calculate the *binding energy per nucleon*, which is the nuclear binding energy of a nuclide divided by the number of nucleons in the nuclide. For helium-4, we calculate the binding energy per nucleon as follows:

$$\begin{aligned} \text{binding energy per nucleon} &= \frac{28.30 \text{ MeV}}{4 \text{ nucleons}} \\ &= 7.075 \text{ MeV per nucleon} \end{aligned}$$

We can calculate the binding energy per nucleon for other nuclides in the same way. For example, the nuclear binding energy of carbon-12 is 7.680 MeV per nucleon. Since the binding energy per nucleon of carbon-12 is greater than that of helium-4, we conclude that the carbon-12 nuclide is more *stable* (it has lower potential energy).

EXAMPLE 20.7

Calculating Mass Defect and Nuclear Binding Energy

Calculate the mass defect and nuclear binding energy per nucleon (in MeV) for C-16, a radioactive isotope of carbon with a mass of 16.014701 amu.

SOLUTION

Calculate the mass defect as the difference between the mass of one C-16 atom and the sum of the masses of 6 hydrogen atoms and 10 neutrons.	$\begin{aligned} \text{mass defect} &= 6(\text{mass } {}^1_1\text{H}) + 10(\text{mass } {}^1_0\text{n}) - \text{mass } {}^{16}_6\text{C} \\ &= 6(1.00783 \text{ amu}) + 10(1.00866 \text{ amu}) - 16.014701 \text{ amu} \\ &= 0.118879 \text{ amu} \end{aligned}$
Calculate the nuclear binding energy by converting the mass defect (in amu) into MeV. (Use 1 amu = 931.5 MeV.)	$0.118879 \text{ amu} \times \frac{931.5 \text{ MeV}}{\text{amu}} = 110.74 \text{ MeV}$
Determine the nuclear binding energy per nucleon by dividing by the number of nucleons in the nucleus.	$\text{nuclear binding energy per nucleon} = \frac{110.74 \text{ MeV}}{16 \text{ nucleons}} = 6.921 \text{ MeV/nucleon}$

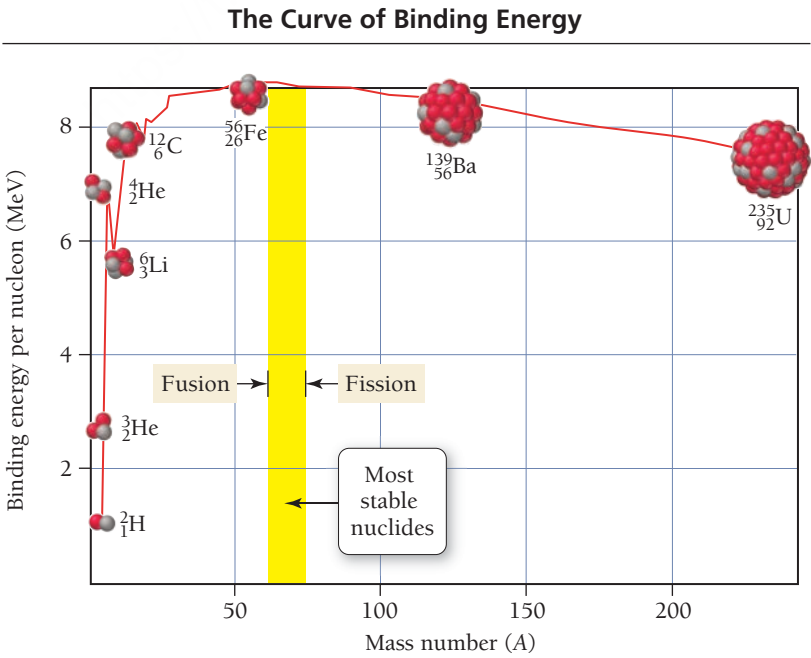
FOR PRACTICE 20.7

Calculate the mass defect and nuclear binding energy per nucleon (in MeV) for U-238, which has a mass of 238.050784 amu.

The Nuclear Binding Energy Curve

Figure 20.12 ▼ shows the binding energy per nucleon plotted as a function of mass number (A). The binding energy per nucleon is relatively low for small mass numbers and increases until about A = 60, where it reaches a maximum. Nuclides with mass numbers of about 60, therefore, are among the most stable. Beyond A = 60, the binding energy per nucleon decreases again. The figure illustrates why nuclear fission is a highly exothermic process. When a heavy nucleus, such as U-235, breaks up into smaller nuclei, such as Ba-140 and Kr-93, the binding energy per nucleon increases. This is analogous to a chemical reaction in which weak bonds break and strong bonds form. In both cases, the process is exothermic. Figure 20.12 also reveals that *combining* two lighter nuclei (below A = 60) to form a heavier nucleus is exothermic as well. This process is called *nuclear fusion*, which we discuss in the next section of this chapter.

FIGURE 20.12 Nuclear Binding Energy per Nucleon The nuclear binding energy per nucleon (a measure of the stability of a nucleus) reaches a maximum at about A = 60. Energy can be obtained either by breaking a heavy nucleus up into lighter ones (fission) or by combining lighter nuclei into heavier ones (fusion).



20.9 Nuclear Fusion: The Power of the Sun

Nuclear fission is the *splitting* of a heavy nucleus to form two or more lighter ones. **Nuclear fusion**, by contrast, is the *combination* of two light nuclei to form a heavier one. Both fusion and fission emit large amounts of energy because, as we have just seen, they both form daughter nuclides with greater binding energies per nucleon than the parent nuclides. Nuclear fusion is the energy source of stars, including our sun. In stars, hydrogen atoms fuse together to form helium atoms, emitting energy in the process.

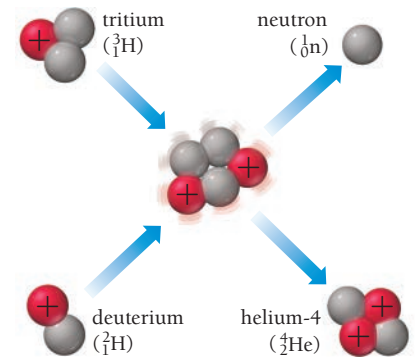
Nuclear fusion is also the basis of modern nuclear weapons called hydrogen bombs. A modern hydrogen bomb has up to 1000 times the explosive force of the first atomic bombs. These bombs employ the fusion reaction shown here:



In this reaction, deuterium (the isotope of hydrogen with one neutron) and tritium (the isotope of hydrogen with two neutrons) combine to form helium-4 and a neutron (**Figure 20.13** ►). Because fusion reactions require two positively charged nuclei (which repel each other) to fuse together, extremely high temperatures are required. In a hydrogen bomb, a small fission bomb is detonated first, creating temperatures and pressures high enough for fusion to proceed.


Nuclear fusion has been intensely investigated as a way to produce electricity. Because of the higher energy density—fusion provides about 10 times more energy per gram of fuel than does fission—and because the products of the reaction are less problematic than those of fission, fusion holds promise as a future energy source. However, despite concerted efforts, the generation of electricity by fusion remains elusive. One of the main problems is the high temperature required for fusion to occur—no material can withstand those temperatures. Using powerful magnetic fields or laser beams, scientists have succeeded in compressing and heating nuclei to the point where fusion has been initiated and even sustained for brief periods of time (**Figure 20.14** ▼). To date, however, the amount of energy generated by fusion reactions has been less than the amount required to get it to occur. After years of allocating billions of dollars on fusion research, the U.S. Congress has reduced funding for these projects. Whether fusion will ever be a viable energy source remains uncertain.

Deuterium-Tritium Fusion Reaction



▲ **FIGURE 20.13 A Nuclear Fusion Reaction** In this reaction, two heavy isotopes of hydrogen, deuterium (hydrogen-2) and tritium (hydrogen-3), fuse to form helium-4 and a neutron.

Tokamak Fusion Reactor



▲ **FIGURE 20.14 Tokamak Fusion Reactor** A tokamak uses powerful magnetic fields to confine nuclear fuel at the enormous temperatures needed for fusion. The high temperatures produce a plasma, a state of matter in which some fraction of the atoms are ionized.

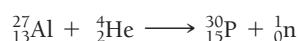
20.10 Nuclear Transmutation and Transuranium Elements

One of the goals of the early chemists of the Middle Ages, who were known as *alchemists*, was to transform ordinary metals into gold. Many alchemists hoped to turn low-cost metals, such as lead or tin, into precious metals and in this way become wealthy. These alchemists were never successful because their attempts were merely chemical—they mixed different metals together or tried to get them to react with other substances in order to turn them into gold. In a chemical reaction, an element retains its identity, so a less valuable metal—such as lead—always remains lead, even when it forms a compound with another element.

Nuclear reactions, in contrast to chemical reactions, result in the transformation of one element into another, a process known as **transmutation**. We have already seen how this occurs in radioactive decay, in fission, and in fusion. In addition, other nuclear reactions that transmute elements are possible. For example, in 1919 Ernest Rutherford bombarded nitrogen-17 with alpha particles to form oxygen:



Irène Joliot-Curie (1897–1956), who was the daughter of Marie Curie, and her husband Frédéric Joliot (1900–1958), bombarded aluminum-27 with alpha particles to form phosphorus:



In the 1930s, scientists began building devices that accelerate particles to high velocities, opening the door to even more possibilities. These devices are generally of two types, the **linear accelerator** and the **cyclotron**.

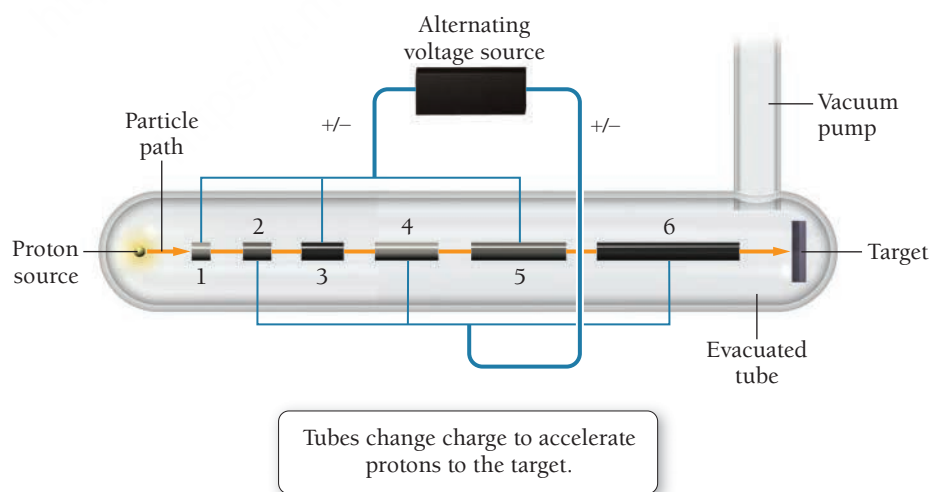
In a *single-stage linear accelerator*, a charged particle such as a proton is accelerated in an evacuated tube. The accelerating force is provided by a potential difference (or voltage) between the ends of the tube. In *multistage linear accelerators*, such as the Stanford Linear Accelerator (SLAC) at Stanford University, a series of tubes of increasing length is connected to a source of alternating voltage, as shown in **Figure 20.15** ▼. The voltage alternates in such a way that, as a positively charged particle leaves a particular tube, that tube becomes positively charged, repelling the particle to the next tube. At the same time, the tube that the particle is now approaching becomes negatively charged, pulling the particle toward it. This continues throughout the linear accelerator, allowing the particle to be accelerated to velocities up to 90% of the speed of light. When particles of this speed collide with a target, they produce a shower of subatomic particles that can be studied. For example, researchers using the Stanford Linear Accelerator were awarded the 1990 Nobel Prize in Physics for discovering evidence that protons and neutrons were composed of still smaller subatomic particles called *quarks*.



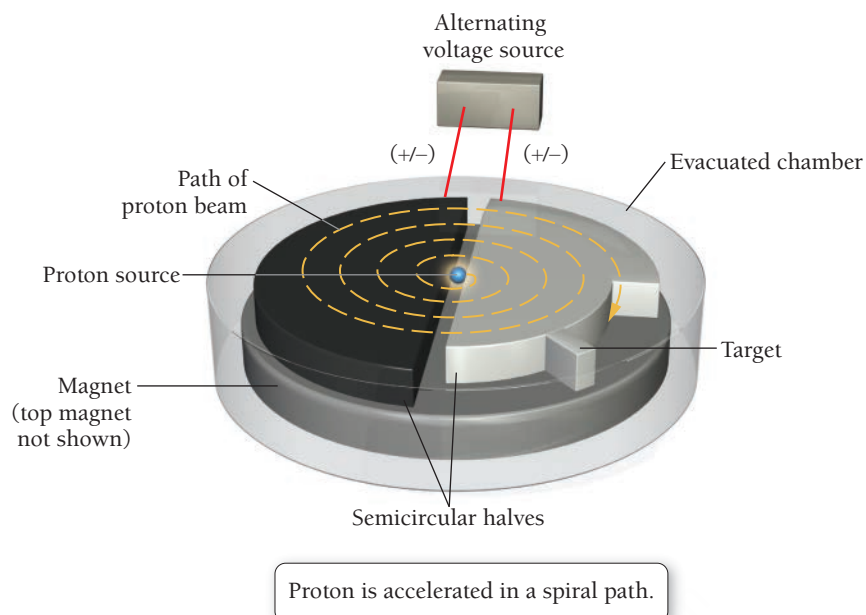
▲ The Joliot-Curies won the 1935 Nobel Prize in Chemistry for their work on nuclear transmutation.



▲ The Stanford Linear Accelerator is located at Stanford University in California.



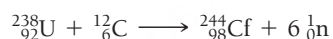
▲ **FIGURE 20.15 The Linear Accelerator** In a multistage linear accelerator, the charge on successive tubes (numbered 1–6 in this diagram) is rapidly alternated in such a way that as a positively charged particle leaves a particular tube, that tube becomes positively charged, repelling the particle toward the next tube. At the same time, the tube that the particle is now approaching becomes negatively charged, pulling the particle toward it. This process repeats itself through a number of tubes until the particle has been accelerated to a high velocity.



▲ **FIGURE 20.16 The Cyclotron** In a cyclotron, two semicircular D-shaped structures are subjected to an alternating voltage. A charged particle (such as a proton), starting from a point between the two, is accelerated back and forth between them, while additional magnets cause the particle to move in a spiral path.

In a cyclotron, a similarly alternating voltage is used to accelerate a charged particle, only this time the alternating voltage is applied between the two semicircular halves of the cyclotron (**Figure 20.16** ▲). A charged particle originally in the middle of the two semicircles is accelerated back and forth between them. Additional magnets cause the particle to move in a spiral path. As the charged particle spirals out from the center, it gains speed and eventually exits the cyclotron aimed at the target.

With linear accelerators or cyclotrons, all sorts of nuclear transmutations can be achieved. In this way, scientists have made nuclides that don't normally exist in nature. For example, uranium-238 can be made to collide with carbon-12 to form an element with atomic number 98:



This element was named californium (Cf) because it was first produced (by a slightly different nuclear reaction) at the University of California at Berkeley. Many other nuclides with atomic numbers larger than that of uranium have been synthesized since the 1940s. These synthetic elements—called transuranium elements—have been added to the periodic table.



▲ The Fermi National Accelerator Laboratory complex in Batavia, Illinois, includes two cyclotrons in a figure-8 configuration.

Most synthetic elements are unstable and have very short half-lives. Some exist for only fractions of a second after they are made.

Nuclear Transformations

Californium-252 is bombarded with a boron-10 nucleus to produce another nuclide and six neutrons. Which nuclide forms?

20.4



Conceptual Connection



20.11 The Effects of Radiation on Life

As we discussed in Section 20.3, the energy associated with radioactivity can ionize molecules. When radiation ionizes important molecules in living cells, problems can develop. The ingestion of radioactive materials—especially alpha and beta emitters—is particularly dangerous because the radioactivity, once inside the body, can do even more damage. We divide the effects of radiation into three different types: acute radiation damage, increased cancer risk, and genetic defects.

Acute Radiation Damage

Acute radiation damage results from exposure to large amounts of radiation in a short period of time. The main sources of this kind of exposure are nuclear bombs and exposed nuclear reactor cores. These high levels of radiation kill large numbers of cells. Rapidly dividing cells, such as those in the immune system and the intestinal lining, are most susceptible. Consequently, people exposed to high levels of radiation have weakened immune systems and a lowered ability to absorb nutrients from food. In milder cases, recovery is possible with time. In more extreme cases, death results, often from infection.

Increased Cancer Risk

Lower doses of radiation over extended periods of time can increase cancer risk. Radiation increases cancer risk because it can damage DNA, the molecules in cells that carry instructions for cell growth and replication. When the DNA within a cell is damaged, the cell normally dies. Occasionally, however, changes in DNA cause cells to grow abnormally and to become cancerous. These cancerous cells grow into tumors that can spread and, in some cases, cause death. Cancer risk increases with increasing radiation exposure. However, cancer is so prevalent and has so many convoluted causes that determining an exact exposure level for increased cancer risk from radiation exposure is difficult.

Genetic Defects

Another possible effect of radiation exposure is genetic defects in future generations. If radiation damages the DNA of reproductive cells—such as eggs or sperm—then the offspring that develop from those cells may have genetic abnormalities. Genetic defects of this type have been observed in laboratory animals exposed to high levels of radiation. However, such genetic defects—with a clear causal connection to radiation exposure—have yet to be verified in humans, even in studies of Hiroshima survivors.

Measuring Radiation Exposure and Dose

We measure radiation exposure in a number of different ways. One method is to measure **exposure**, the number of decay events to which a person is exposed. The unit used for this type of exposure measurement is the *curie* (Ci), defined as 3.7×10^{10} decay events per second. A person exposed to a curie of radiation from an alpha emitter is bombarded by 3.7×10^{10} alpha particles per second. However, recall that different kinds of radiation produce different effects. For example, we know that alpha radiation has much greater ionizing power than beta radiation. Consequently, a certain number of alpha decays occurring within a person's body (due to the ingestion of an alpha emitter) would do more damage than the same number of beta decays. If the alpha emitter and beta emitter were external to the body, however, the radiation from the alpha emitter would largely be stopped by clothing or the skin (due to the low penetrating power of alpha radiation), while the radiation from the beta emitter could penetrate the skin and cause more damage. Consequently, the curie is not an effective measure of how much biological tissue damage the radiation actually does.

A better way to assess radiation exposure is to measure radiation **dose**, the amount of energy actually absorbed by body tissue. The units used for this type of exposure measurement are the *gray* (Gy), which corresponds to 1 J of energy absorbed per kilogram of body tissue, and the *rad* (for radiation absorbed dose), which corresponds to 0.01 Gy.

$$1 \text{ gray (Gy)} = 1 \text{ J/kg body tissue}$$

$$1 \text{ rad} = 0.01 \text{ J/kg body tissue}$$

TABLE 20.4 Radiation Dose by Source for Persons Living in the United States

Source	Dose
Natural Radiation	
A 5-hour jet airplane ride	2.5 mrem/trip (0.5 mrem/hr at 39,000 feet) (whole body dose)
Cosmic radiation from outer space	27 mrem/yr (whole body dose)
Terrestrial radiation	28 mrem/yr (whole body dose)
Natural radionuclides in the body	35 mrem/yr (whole body dose)
Radon gas	200 mrem/yr (lung dose)
Diagnostic Medical Procedures	
Chest X-ray	8 mrem (whole body dose)
Dental X-rays (panoramic)	30 mrem (skin dose)
Dental X-rays (two bitewings)	80 mrem (skin dose)
Mammogram	138 mrem per image
Barium enema (X-ray portion only)	406 mrem (bone marrow dose)
Upper gastrointestinal tract test (X-ray portion only)	244 mrem (bone marrow dose)
Thallium heart scan	500 mrem (whole body dose)
Consumer Products	
Building materials	3.5 mrem/yr (whole body dose)
Luminous watches (H-3 and Pm-147)	0.04–0.1 mrem/yr (whole body dose)
Tobacco products (to smokers of 30 cigarettes per day)	16,000 mrem/yr (bronchial epithelial dose)

Source: Department of Health and Human Services, National Institutes of Health.

Although the gray and the rad measure the actual energy absorbed by bodily tissues, they still do not account for the amount of damage to biological molecules caused by that energy absorption, which differs from one type of radiation to another and from one type of biological tissue to another. For example, when a gamma ray passes through biological tissue, the energy absorbed is spread out over the long distance that the radiation travels through the body, resulting in a low ionization density within the tissue. When an alpha particle passes through biological tissue, in contrast, the energy is absorbed over a much shorter distance, resulting in a much higher ionization density. The higher ionization density results in greater damage, even though the amount of energy absorbed by the tissue might be the same.

Consequently, a correction factor, called the **biological effectiveness factor**, or **RBE** (for Relative Biological Effectiveness), is usually multiplied by the dose in rads to obtain the dose in a unit called the **rem** for roentgen equivalent man.

dose in rads × biological effectiveness factor = dose in rems

The biological effectiveness factor for alpha radiation, for example, is much higher than that for gamma radiation.

On average, each of us is exposed to approximately 310 mrem of radiation per year from the natural sources listed in Table 20.4. The majority of this exposure comes from radon, one of the products in the uranium decay series. As you can see from Table 20.4, however, some medical procedures also involve exposure levels similar to those received from natural sources. The increased use of computed tomography (CT) scans over the last decade—which have associated exposures of 200–1600 mrem—has raised some concerns about the overuse of that technology in medicine.

It takes much more than the average natural radiation dose or the dose from a medical diagnostic procedure to produce significant health effects in humans. The first measurable effect, a decreased white blood cell count, occurs at instantaneous exposures of approximately 20 rem (Table 20.5). Exposures of 100 rem produce a definite increase in cancer risk, and exposures of over 500 rem often result in death.

A *roentgen* is the amount of radiation that produces 2.58×10^{-1} C of charge per kg of air.

The SI unit that corresponds to the rem is the sievert (Sv). However, the rem is still commonly used in the United States. The conversion factor is 1 rem = 0.01 Sv.

TABLE 20.5 Effects of Radiation Exposure

Approximate Dose (rem)	Probable Outcome
20–100	Decreased white blood cell count; possible increase in cancer risk
100–400	Radiation sickness including vomiting and diarrhea; skin lesions; increase in cancer risk
500	Death (often within 2 months)
1000	Death (often within 2 weeks)
2000	Death (within hours)



20.5
Cc

Conceptual
Connection

Radiation Dose

Suppose a person ingests equal amounts of two nuclides, both of which are beta emitters (of roughly equal energy). Nuclide A has a half-life of 8.5 hours, and Nuclide B has a half-life of 15.0 hours. Both nuclides are eliminated from the body within 24 hours of ingestion. Which of the two nuclides produces the greater radiation dose?

20.12 Radioactivity in Medicine and Other Applications

Radioactivity is often perceived as dangerous; however, it is also immensely useful to physicians in the diagnosis and treatment of disease and has numerous other valuable applications. We broadly divide the use of radioactivity in medicine into *diagnostic techniques* (which diagnose disease) and *therapeutic techniques* (which treat disease).

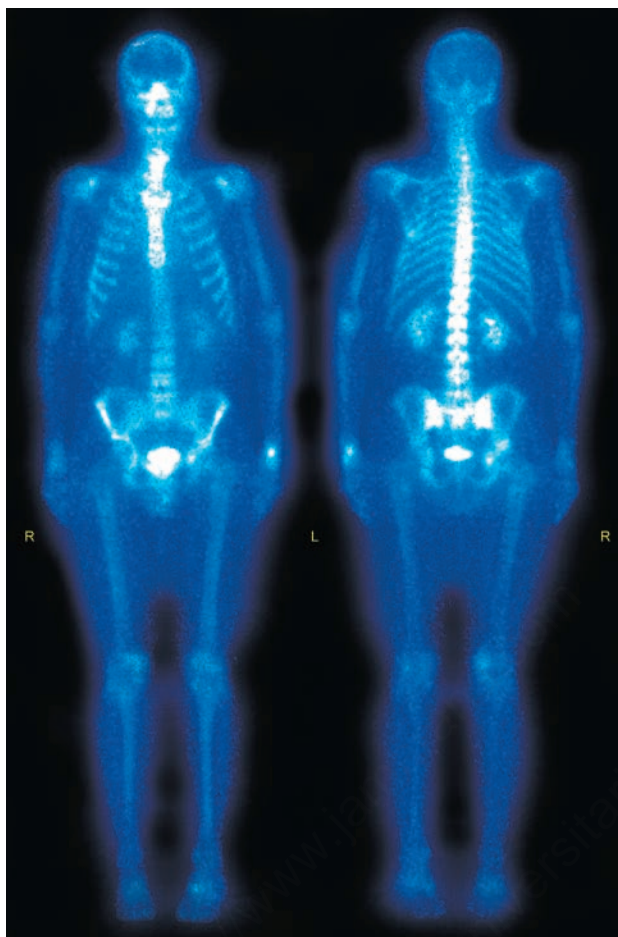
Diagnosis in Medicine

The use of radioactivity in diagnosis usually involves a **radiotracer**, a radioactive nuclide attached to a compound or introduced into a mixture in order to track the movement of the compound or mixture within the body. Tracers are useful in the diagnosis of disease because of two main factors: (1) the sensitivity with which radioactivity can be detected, and (2) the identical chemical behavior of a radioactive nucleus and its nonradioactive counterpart. For example, the thyroid gland naturally concentrates iodine. When a patient is given small amounts of iodine-131 (a radioactive isotope of iodine), the radioactive iodine accumulates in the thyroid, just as nonradioactive iodine does. However, the radioactive iodine emits radiation, which can then be detected with great sensitivity and used to measure the rate of iodine uptake by the thyroid, and thus to image the gland.

Because different radiotracers are taken up preferentially by different organs or tissues, various radiotracers are used to monitor metabolic activity and image a variety of organs and structures, including the kidneys, heart, brain, gallbladder, bones, and arteries, as shown in Table 20.6. Radiotracers can also be employed to locate infections or cancers within the body. To locate an infection, antibodies are labeled (or tagged) with a radioactive nuclide, such as technetium-99m (where “m” means metastable),

TABLE 20.6 Common Radiotracers

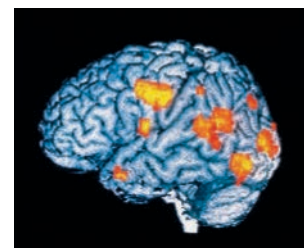
Nuclide	Type of Emission	Half-Life	Part of Body Studied
technetium-99m	gamma (primarily)	6.01 hours	Various organs, bones
iodine-131	beta	8.0 days	Thyroid
iron-59	beta	44.5 days	Blood, spleen
thallium-201	electron capture	3.05 days	Heart
fluorine-18	positron emission	1.83 hours	PET studies of heart, brain
phosphorus-32	beta	14.3 days	Tumors in various organs



▲ **FIGURE 20.17 A Bone Scan** These images, front and rear views of the human body, were created by the gamma ray emissions of Tc-99m. Such scans are often used to locate cancer that has metastasized (spread) to the bones from a primary tumor elsewhere.

and administered to the patient. The tagged antibodies aggregate at the infected site, as described in Section 20.1. Cancerous tumors can be detected because they naturally concentrate phosphorus. When a patient is given phosphorus-32 (a radioactive isotope of phosphorus) or a phosphate compound incorporating another radioactive isotope such as Tc-99m, the tumors concentrate the radioactive substance and become sources of radioactivity that can be detected (**Figure 20.17** ▲).

A specialized imaging technique known as **positron emission tomography (PET)** employs positron-emitting nuclides, such as fluorine-18, synthesized in cyclotrons. The fluorine-18 is attached to a metabolically active substance such as glucose and administered to the patient. As the glucose travels through the bloodstream and to the heart and brain, it carries the radioactive fluorine, which decays with a half-life of just under 2 hours. When a fluorine-18 nuclide decays, it emits a positron that immediately combines with any nearby electrons. Since a positron and an electron are antiparticles, they annihilate one another, producing two gamma rays that travel in exactly opposing directions. The gamma rays are detected by an array of detectors that can locate the point of origin of the rays with great accuracy. The result is a set of highly detailed images that show both the rate of glucose metabolism and structural features of the imaged organ (**Figure 20.18** ►).



▲ **FIGURE 20.18 A PET Scan** The colored areas indicate regions of high metabolic activity in the brain of a schizophrenic patient experiencing hallucinations.

Radiotherapy in Medicine

Because radiation kills cells and is particularly effective at killing rapidly dividing cells, it is often used as a therapy for cancer (cancer cells reproduce much faster than normal cells). Medical technicians focus high-energy photons on internal tumors to kill them. The photon beam is usually moved

► **FIGURE 20.19 Radiotherapy for Cancer**

This treatment involves exposing a malignant tumor to high-energy photons generated by nuclides such as cobalt-60. The beam is moved in a circular pattern around the tumor to maximize exposure of the tumor to radiation while minimizing the exposure of healthy tissues.



▲ **FIGURE 20.20 Irradiation of Food** Irradiation kills microbes that cause food to decay, allowing longer and safer storage. The food is not made radioactive, and its properties are unchanged in the process. These strawberries were picked at the same time, but those on the bottom were irradiated before storage.

in a circular path around the tumor (**Figure 20.19 ▲**), maximizing the exposure of the tumor while minimizing the exposure of the surrounding healthy tissue. Nonetheless, cancer patients receiving such treatment usually develop the symptoms of radiation sickness, which include vomiting, skin burns, and hair loss.

Why is radiation—which is known to cause cancer—also used to treat cancer? The answer lies in risk analysis. A cancer patient is normally exposed to radiation doses of about 100 rem. Such a dose increases cancer risk by about 1%. However, if the patient has a 100% chance of dying from the cancer that he already has, such a risk becomes acceptable, especially since there is a significant chance of curing the cancer.

Other Applications for Radioactivity

Radioactivity is often used to kill microorganisms. For example, physicians use radiation to sterilize medical devices that are to be surgically implanted. The radiation kills bacteria that might otherwise lead to infection. Similarly, radiation is used to kill bacteria and parasites in foods. The irradiation of foods makes them safer to consume and gives them a longer shelf life (**Figure 20.20 ◀**). The irradiation of raw meat and poultry kills *E. coli* and *Salmonella*, bacteria that can lead to serious illness and even death when consumed. The irradiation of food does not, however, make the food itself radioactive, nor does it decrease the nutritional value of the food. In the United States, the irradiation of many different types of foods—including beef, poultry, potatoes, flour, and fruit—has been approved by the U.S. Food and Drug Administration (FDA) and the U.S. Department of Agriculture (USDA).

Radioactivity is also used to control insect populations. For example, fruit flies can be raised in large numbers in captivity and sterilized with radiation. When these fruit flies are released, they mate with wild fruit flies but do not produce offspring. The efforts of the wild fruit flies, which might otherwise lead to reproduction, are wasted and the next generation of flies is smaller than it would otherwise have been. Similar strategies have been employed to control the populations of disease-carrying mosquitoes. Most recently, Brazil has used this technique to fight the spread of the Zika virus.

SELF-ASSESSMENT

QUIZ



- What daughter nuclide forms when polonium-214 undergoes alpha decay?
a) ${}_{86}^{218}\text{Rn}$ b) ${}_{85}^{214}\text{At}$ c) ${}_{83}^{214}\text{Bi}$ d) ${}_{82}^{210}\text{Pb}$
 - Which nuclear equation accurately represents the beta decay of Xe-133?
a) ${}_{54}^{133}\text{Xe} \longrightarrow {}_{55}^{133}\text{Cs} + {}_{-1}^0\text{e}$
b) ${}_{54}^{133}\text{Xe} \longrightarrow {}_{53}^{133}\text{I} + {}_{+1}^0\text{e}$
c) ${}_{54}^{133}\text{Xe} \longrightarrow {}_{-1}^0\text{e} + {}_{53}^{133}\text{I}$
d) ${}_{54}^{133}\text{Xe} \longrightarrow {}_{52}^{129}\text{Cs} + {}_2^4\text{He}$
 - Which nuclide is most likely to undergo beta decay?
a) Si-22 b) Rb-91 c) Ar-35 d) Co-52
 - Which form of radioactive decay would you be most likely to detect if it were happening in the room next to the one you are currently in?
a) alpha
b) beta
c) gamma
d) positron emission
 - The chart below shows the mass of a decaying nuclide versus time. What is the half-life of the decay?
-
- Iron-59 is a beta emitter with a half-life of 44.5 days. If a sample initially contains 132 mg of iron-59, how much iron-59 is left in the sample after 265 days?
a) 0.00 mg
b) 2.13 mg
c) 33.2 mg
d) 66.0 mg
 - An artifact has a carbon-14 decay rate of 8.55 disintegrations per minute per gram of carbon (8.55 dis/min • gC). Living organisms have a carbon-14 decay rate of 15.3 dis/min • gC. How old is the artifact? (The half-life of carbon-14 is 5715 yr.)
a) 4.80×10^3 yr
b) 2.10×10^3 yr
c) 3.20×10^3 yr
d) 1.21×10^{-4} yr
 - An igneous rock contains a Pb-206/U-238 mass ratio of 0.372. How old is the rock? (U-238 decays into Pb-206 with a half-life of 4.5×10^9 yr.)
a) 4.50×10^9 yr
b) 6.42×10^9 yr
c) 2.05×10^9 yr
d) 2.32×10^9 yr
 - Calculate the nuclear binding energy per nucleon for cobalt-59, the only stable isotope of cobalt. The mass of cobalt-59 is 58.933198 amu. (The mass of ${}_1^1\text{H}$ is 1.00783 amu, and the mass of a neutron is 1.00866 amu.)
a) 517.3 MeV
b) 8.768 MeV
c) 19.16 MeV
d) 1.011×10^{-5} MeV
 - Which problem is not associated with nuclear power generation?
a) danger of overheated nuclear core
b) waste disposal
c) global warming
d) none of the above (All of the above are problems associated with nuclear power generation.)

- 15 min
- 25 min
- 35 min
- 70 min

Answers: 1. d; 2. a; 3. b; 4. c; 5. c; 6. b; 7. a; 8. d; 9. b; 10. c

CHAPTER SUMMARY

20

MasteringChemistry™ provides end-of-chapter exercises, feedback-enriched tutorial problems, animations, and interactive activities to encourage problem solving practice and deeper understanding of key concepts and topics.

REVIEW

KEY LEARNING OUTCOMES

CHAPTER OBJECTIVES	ASSESSMENT
Write Nuclear Equations for Alpha Decay (20.3)	• Example 20.1 For Practice 20.1 Exercises 31–36
Write Nuclear Equations for Beta Decay, Positron Emission, and Electron Capture (20.3)	• Example 20.2 For Practice 20.2 For More Practice 20.2 Exercises 31–36
Predict the Type of Radioactive Decay (20.4)	• Example 20.3 For Practice 20.3 Exercises 41, 42
Use Radioactive Decay Kinetics (20.6)	• Example 20.4 For Practice 20.4 Exercises 45–52
Use Radiocarbon Dating (20.6)	• Example 20.5 For Practice 20.5 Exercises 53, 54
Use Uranium/Lead Dating (20.6)	• Example 20.6 For Practice 20.6 Exercises 55, 56
Determine the Mass Defect and Nuclear Binding Energy (20.8)	• Example 20.7 For Practice 20.7 Exercises 65–72

KEY TERMS

Section 20.1

radioactivity (894)
radioactive (894)

Section 20.2

phosphorescence (894)

Section 20.3

nuclide (895)
alpha (α) decay (896)
alpha (α) particle (896)
nuclear equation (896)
ionizing power (897)
penetrating power (897)
beta (β) decay (897)
beta (β) particle (897)

gamma (γ) ray emission (898)
gamma (γ) ray (898)
positron emission (898)
positron (898)
electron capture (899)

Section 20.4

nucleons (901)
strong force (901)
magic numbers (902)

Section 20.5

thermoluminescent dosimeter (903)
Geiger-Müller counter (903)
scintillation counter (903)

Section 20.6

radiometric dating (907)
radiocarbon dating (907)

Section 20.7

nuclear fission (910)
chain reaction (911)
critical mass (911)

Section 20.8

mass defect (915)
nuclear binding energy (915)

Section 20.9

nuclear fusion (917)

Section 20.10

transmutation (918)
linear accelerator (918)
cyclotron (918)

Section 20.11

exposure (920)
dose (920)
biological effectiveness factor (RBE) (921)
rem (921)

Section 20.12

radiotracer (922)
positron emission tomography (PET) (923)

KEY CONCEPTS

Diagnosing Appendicitis (20.1)

- Radioactivity is the emission of subatomic particles or energetic electromagnetic radiation by the nuclei of certain atoms.
- Because some of these emissions can pass through matter, radioactivity is useful in medicine and many other areas of study.

The Discovery of Radioactivity (20.2)

- Antoine-Henri Becquerel discovered radioactivity when he found that uranium causes a photographic exposure in the absence of light.
- Marie Skłodowska Curie later determined that this phenomenon was not unique to uranium, and she began calling the rays that produced the exposure radioactivity. Curie also discovered two new elements, polonium and radium.

Types of Radioactivity (20.3)

- The major types of natural radioactivity are alpha (α) decay, beta (β) decay, gamma (γ) ray emission, and positron emission.
- Alpha radiation is helium nuclei. Beta particles are electrons. Gamma rays are electromagnetic radiation of very high energy. Positrons are the antiparticles of electrons.
- A nucleus may absorb one of its orbital electrons in a process called electron capture.
- We can represent each radioactive process with a nuclear equation that illustrates how the parent nuclide changes into the daughter nuclide. In a nuclear equation, although the specific types of atoms may not balance, the atomic numbers and mass numbers must.
- Each type of radioactivity has a different ionizing and penetrating power. These values are inversely related; a particle with a higher

ionizing power has a lower penetrating power. Alpha particles are the most massive and have the highest ionizing power, followed by beta particles and positrons, which are equivalent in their ionizing power. Gamma rays have the lowest ionizing power.

The Valley of Stability: Predicting the Type of Radioactivity (20.4)

- The stability of a nucleus, and therefore the probability that it will undergo radioactive decay, depends largely on two factors. The first is the ratio of neutrons to protons (N/Z), because neutrons provide a strong force that overcomes the electromagnetic repulsions between the positive protons. This ratio is one for smaller elements but becomes greater than one for larger elements. The second factor related to nuclei stability is a concept known as magic numbers; certain numbers of nucleons are more stable than others.

Detecting Radioactivity (20.5)

- Radiation detectors determine the quantity of radioactivity in an area or sample.
- Thermoluminescent dosimeters employ salt crystals for detection of radiation; such detectors do not provide an instantaneous reading.
- Two detectors that instantly register the amount of radiation are the Geiger-Müller counter, which uses the ionization of argon by radiation to produce an electrical signal, and the scintillation counter, which uses the emission of light induced by radiation.

The Kinetics of Radioactive Decay and Radiometric Dating (20.6)

- All radioactive elements decay according to first-order kinetics (Chapter 14); the half-life equation and the integrated rate law for radioactive decay are derived from the first-order rate laws.
- The kinetics of radioactive decay is used to date objects and artifacts. The age of materials that were once part of living organisms is measured by carbon-14 dating. The age of ancient rocks and even Earth itself is determined by uranium/lead dating.

The Discovery of Fission: The Atomic Bomb and Nuclear Power (20.7)

- Fission is the splitting of an atom, such as uranium-235, into two atoms of lesser atomic weight.
- Because the fission of one uranium-235 atom releases enormous amounts of energy and produces neutrons that can split other uranium-235 atoms, the energy from these collective reactions can be harnessed in an atomic bomb or nuclear reactor.
- Nuclear power produces no air pollution and requires little mass to release lots of energy; however, there is always a danger of accidents, and it is difficult to dispose of nuclear waste.

Converting Mass to Energy: Mass Defect and Nuclear Binding Energy (20.8)

- In a nuclear fission reaction, mass is converted into energy.
- The difference in mass between a nuclide and the individual protons and neutrons that compose it is the mass defect, and the corresponding energy, calculated from Einstein's equation $E = mc^2$, is the nuclear binding energy.
- The stability of a nucleus is determined by the binding energy per nucleon, which increases up to mass number 60 and then decreases.

Nuclear Fusion: The Power of the Sun (20.9)

- Stars produce their energy by a process that is the opposite of fission: nuclear fusion, the combination of two light nuclei to form a heavier one.
- Modern nuclear weapons employ fusion. Although fusion has been examined as a possible method to produce electricity, experiments with hydrogen fusion have been more costly than productive.

Nuclear Transmutation and Transuranium Elements (20.10)

- Nuclear transmutation, the changing of one element to another element, has been used to create the transuranium elements, elements with atomic numbers greater than that of uranium.
- Two devices that accelerate particles to the high speeds necessary for transmutation reactions are the linear accelerator and the cyclotron. Both use alternating voltage to propel particles by electromagnetic forces.

The Effects of Radiation on Life (20.11)

- Acute radiation damage is caused by a large exposure to radiation for a short period of time. Lower radiation exposures may result in increased cancer risk because of damage to DNA. Genetic defects are caused by damage to the DNA of reproductive cells.
- The most effective unit of measurement for the amount of radiation absorbed is the rem, which takes into account the different penetrating and ionizing powers of the various types of radiation.

Radioactivity in Medicine and Other Applications (20.12)

- Radioactivity is central to the diagnosis of medical problems by means of radiotracers and positron emission tomography (PET). Both of these techniques can provide data about the appearance and metabolic activity of an organ or help locate a tumor.
- Radiation is employed to treat cancer because it kills cells. Radiation is also used to kill bacteria in foods and to control harmful insect populations.

KEY EQUATIONS AND RELATIONSHIPS

The First-Order Rate Law (20.6)

$$\text{rate} = kN$$

The Half-Life Equation (20.6)

$$t_{1/2} = \frac{0.693}{k} \quad k = \text{rate constant}$$

The Integrated Rate Law (20.6)

$$\ln \frac{N_t}{N_0} = -kt \quad N_t = \text{number of radioactive nuclei at time } t$$

$$N_0 = \text{initial number of radioactive nuclei}$$

Einstein's Energy-Mass Equation (20.8)

$$E = mc^2$$

EXERCISES

REVIEW QUESTIONS

1. What is radioactivity? Who discovered it? How was it discovered?
2. Explain Marie Curie's role in the discovery of radioactivity.
3. Define A , Z , and X in the notation used to specify a nuclide: A_ZX .
4. Use the notation from Question 3 to write symbols for a proton, a neutron, and an electron.
5. What is an alpha particle? What happens to the mass number and atomic number of a nuclide that emits an alpha particle?
6. What is a beta particle? What happens to the mass number and atomic number of a nuclide that emits a beta particle?
7. What is a gamma ray? What happens to the mass number and atomic number of a nuclide that emits a gamma ray?
8. What is a positron? What happens to the mass number and atomic number of a nuclide that emits a positron?
9. Describe the process of electron capture. What happens to the mass number and atomic number of a nuclide that undergoes electron capture?
10. Rank alpha particles, beta particles, positrons, and gamma rays in terms of: (a) increasing ionizing power; (b) increasing penetrating power.
11. Explain why the ratio of neutrons to protons (N/Z) is important in determining nuclear stability. How can you use the N/Z ratio of a nuclide to predict the kind of radioactive decay that it might undergo?
12. What are magic numbers? How are they important in determining the stability of a nuclide?
13. Describe the basic way that each device detects radioactivity: (a) thermoluminescent dosimeter; (b) Geiger-Müller counter; and (c) scintillation counter.
14. Explain the concept of half-life with respect to radioactive nuclides. What rate law is characteristic of radioactivity?
15. Explain the main concepts behind the technique of radiocarbon dating. How is radiocarbon dating corrected for changes in atmospheric concentrations of C-14? What range of ages is reliably determined by C-14 dating?
16. How is the uranium to lead ratio in a rock used to estimate its age? How does this dating technique provide an estimate for Earth's age? How old is Earth according to this dating method?
17. Describe fission. Include the concepts of chain reaction and critical mass in your description. How and by whom was fission discovered? Explain how fission is used to generate electricity.
18. What was the Manhattan Project? Briefly describe its development and culmination.
19. Describe the advantages and disadvantages of using fission to generate electricity.
20. The products of a nuclear reaction usually have a different mass than the reactants. Why?
21. Explain the concepts of mass defect and nuclear binding energy. At what mass number does the nuclear binding energy per nucleon peak? What is the significance of this?
22. What is fusion? Why can fusion and fission both produce energy? Explain.
23. What are some of the challenges associated with using fusion to generate electricity?
24. Explain transmutation and provide one or two examples.
25. How does a linear accelerator work? For what purpose is it used?
26. Explain the basic principles of cyclotron function.
27. How does radiation affect living organisms?
28. Explain why different kinds of radiation affect biological tissues differently, even though the amount of radiation exposure may be the same.
29. Explain the significance of the biological effectiveness factor in measuring radiation exposure. What types of radiation would you expect to have the highest biological effectiveness factor?
30. Describe some of the medical uses of radioactivity in both the diagnosis and treatment of disease.

PROBLEMS BY TOPIC

Note: Answers to all odd-numbered Problems, numbered in blue, can be found in Appendix III. Exercises in the Problems by Topic section are paired, with each odd-numbered problem followed by a similar even-numbered problem. Exercises in the Cumulative Problems section are also paired but more loosely. Because of their nature, Challenge Problems and Conceptual Problems are unpaired.

Radioactive Decay and Nuclide Stability

31. Write a nuclear equation for the indicated decay of each nuclide.
 - a. U-234 (alpha)
 - b. Th-230 (alpha)
 - c. Pb-214 (beta)
 - d. N-13 (positron emission)
 - e. Cr-51 (electron capture)
32. Write a nuclear equation for the indicated decay of each nuclide.
 - a. Po-210 (alpha)
 - b. Ac-227 (beta)
 - c. Tl-207 (beta)
 - d. O-15 (positron emission)
 - e. Pd-103 (electron capture)
33. Write a partial decay series for Th-232 undergoing the sequential decays: α , β , β , α .
34. Write a partial decay series for Rn-220 undergoing the sequential decays: α , α , β , β .
35. Fill in the missing particle in each nuclear equation.
 - a. $\text{_____} \longrightarrow {}^{217}_{85}\text{At} + {}^4_2\text{He}$
 - b. ${}^{241}_{94}\text{Pu} \longrightarrow {}^{241}_{95}\text{Am} + \text{_____}$
 - c. ${}^{19}_{11}\text{Na} \longrightarrow {}^{19}_{10}\text{Ne} + \text{_____}$
 - d. ${}^{75}_{34}\text{Se} + \text{_____} \longrightarrow {}^{75}_{33}\text{As}$
36. Fill in the missing particle in each nuclear equation.
 - a. ${}^{241}_{95}\text{Am} \longrightarrow {}^{237}_{93}\text{Np} + \text{_____}$
 - b. $\text{_____} \longrightarrow {}^{233}_{92}\text{U} + {}^0_{-1}\text{e}$
 - c. ${}^{237}_{93}\text{Np} \longrightarrow \text{_____} + {}^4_2\text{He}$
 - d. ${}^{73}_{35}\text{Br} \longrightarrow \text{_____} + {}^0_{+1}\text{e}$

37. Determine whether or not each nuclide is likely to be stable. State your reasons.
- Mg-26
 - Ne-25
 - Co-51
 - Te-124
38. Determine whether or not each nuclide is likely to be stable. State your reasons.
- Ti-48
 - Cr-63
 - Sn-102
 - Y-88
39. The first six elements of the first transition series have the following number of stable isotopes:

Element	Number of Stable Isotopes
Sc	1
Ti	5
V	1
Cr	3
Mn	1
Fe	4

Explain why Sc, V, and Mn each has only one stable isotope while the other elements have several.

40. Neon and magnesium each have three stable isotopes, while sodium and aluminum each have only one. Explain why this might be so.
41. Predict a likely mode of decay for each unstable nuclide.
- Mo-109
 - Ru-90
 - P-27
 - Sn-100
42. Predict a likely mode of decay for each unstable nuclide.
- Sb-132
 - Te-139
 - Fr-202
 - Ba-123
43. Which nuclide of each pair would you expect to have the longer half-life?
- Cs-113 or Cs-125
 - Fe-62 or Fe-70
44. Which one of each pair of nuclides would you expect to have the longer half-life?
- Cs-149 or Cs-139
 - Fe-45 or Fe-52
47. A radioactive sample contains 1.55 g of an isotope with a half-life of 3.8 days. What mass of the isotope remains after 5.5 days?
48. At 8:00 A.M., a patient receives a 1.5- μ g dose of I-131 to treat thyroid cancer. If the nuclide has a half-life of eight days, what mass of the nuclide remains in the patient at 5:00 P.M. the next day? (Assume no excretion of the nuclide from the body.)
49. A sample of F-18 has an initial decay rate of 1.5×10^5 dis/s. How long will it take for the decay rate to fall to 2.5×10^3 dis/s? (F-18 has a half-life of 1.83 hours.)
50. A sample of Tl-201 has an initial decay rate of 5.88×10^4 dis/s. How long will it take for the decay rate to fall to 287 dis/s? (Tl-201 has a half-life of 3.042 days.)
51. A wooden boat discovered just south of the Great Pyramid in Egypt has a carbon-14/carbon-12 ratio that is 72.5% of that found in living organisms. How old is the boat?
52. A layer of peat beneath the glacial sediments of the last ice age has a carbon-14/carbon-12 ratio that is 22.8% of that found in living organisms. How long ago was this ice age?
53. An ancient skull has a carbon-14 decay rate of 0.85 disintegrations per minute per gram of carbon (0.85 dis/min \cdot gC). How old is the skull? (Assume that living organisms have a carbon-14 decay rate of 15.3 dis/min \cdot gC and that carbon-14 has a half-life of 5715 yr.)
54. A mammoth skeleton has a carbon-14 decay rate of 0.48 disintegrations per minute per gram of carbon (0.48 dis/min \cdot gC). When did the mammoth live? (Assume that living organisms have a carbon-14 decay rate of 15.3 dis/min \cdot gC and that carbon-14 has a half-life of 5715 yr.)
55. A rock from Australia contains 0.438 g of Pb-206 to every 1.00 g of U-238. Assuming that the rock did not contain any Pb-206 at the time of its formation, how old is the rock?
56. A meteor has a Pb-206:U-238 mass ratio of 0.855:1.00. What is the age of the meteor? (Assume that the meteor did not contain any Pb-206 at the time of its formation.)

Fission, Fusion, and Transmutation

57. Write the nuclear reaction for the neutron-induced fission of U-235 to form Xe-144 and Sr-90. How many neutrons are produced in the reaction?
58. Write the nuclear reaction for the neutron-induced fission of U-235 to produce Te-137 and Zr-97. How many neutrons are produced in the reaction?
59. Write the nuclear equation for the fusion of two H-2 atoms to form He-3 and one neutron.
60. Write the nuclear equation for the fusion of H-3 with H-1 to form He-4.
61. A breeder nuclear reactor is a reactor in which nonfissionable (nonfissile) U-238 is converted into fissionable (fissile) Pu-239. The process involves bombardment of U-238 by neutrons to form U-239, which then undergoes two sequential beta decays. Write nuclear equations for this process.
62. Write the series of nuclear equations to represent the bombardment of Al-27 with a neutron to form a product that subsequently undergoes a beta decay.

The Kinetics of Radioactive Decay and Radiometric Dating

45. One of the nuclides in spent nuclear fuel is U-235, an alpha emitter with a half-life of 703 million years. How long will it take for the amount of U-235 to reach 10.0% of its initial amount?
46. A patient is given 0.050 mg of technetium-99m, a radioactive isotope with a half-life of about 6.0 hours. How long does it take for the radioactive isotope to decay to 1.0×10^{-3} mg? (Assume the nuclide is not excreted from the body.)

63. Rutherfordium-257 was synthesized by bombarding Cf-249 with C-12. Write the nuclear equation for this reaction.
64. Element 107, now named bohrium, was synthesized by German researchers by colliding bismuth-209 with chromium-54 to form a bohrium isotope and one neutron. Write the nuclear equation to represent this reaction.

Energetics of Nuclear Reactions, Mass Defect, and Nuclear Binding Energy

65. If 1.0 g of matter is converted to energy, how much energy is formed?
66. A typical home uses approximately 1.0×10^3 kWh of energy per month. If the energy came from a nuclear reaction, what mass would have to be converted to energy per year to meet the energy needs of the home?
67. Calculate the mass defect and nuclear binding energy per nucleon of each nuclide.
- O-16 (atomic mass = 15.994915 amu)
 - Ni-58 (atomic mass = 57.935346 amu)
 - Xe-129 (atomic mass = 128.904780 amu)
68. Calculate the mass defect and nuclear binding energy per nucleon of each nuclide.
- Li-7 (atomic mass = 7.016003 amu)
 - Ti-48 (atomic mass = 47.947947 amu)
 - Ag-107 (atomic mass = 106.905092 amu)
69. Calculate the quantity of energy produced per gram of U-235 (atomic mass = 235.043922 amu) for the neutron-induced fission of U-235 to form Xe-144 (atomic mass = 143.9385 amu) and Sr-90 (atomic mass = 89.907738 amu) (discussed in Problem 57).

70. Calculate the quantity of energy produced per mole of U-235 (atomic mass = 235.043922 amu) for the neutron-induced fission of U-235 to produce Te-137 (atomic mass = 136.9253 amu) and Zr-97 (atomic mass = 96.910950 amu) (discussed in Problem 58).
71. Calculate the quantity of energy produced per gram of reactant for the fusion of two H-2 (atomic mass = 2.014102 amu) atoms to form He-3 (atomic mass = 3.016029 amu) and one neutron (discussed in Problem 59).
72. Calculate the quantity of energy produced per gram of reactant for the fusion of H-3 (atomic mass = 3.016049 amu) with H-1 (atomic mass = 1.007825 amu) to form He-4 (atomic mass = 4.002603 amu) (discussed in Problem 60).

Effects and Applications of Radioactivity

73. A 75-kg man has a dose of 32.8 rad of radiation. How much energy is absorbed by his body? Compare this energy to the amount of energy absorbed by his body if he jumps from a chair to the floor (assume that the chair is 0.50 m from the ground and that the man absorbs all of the energy from the fall).
74. If a 55-g laboratory mouse has a dose of 20.5 rad of radiation, how much energy is absorbed by the mouse's body?
75. PET studies require fluorine-18, which is produced in a cyclotron and decays with a half-life of 1.83 hours. Assuming that the F-18 can be transported at 60.0 miles/hour, how close must the hospital be to the cyclotron if 65% of the F-18 produced makes it to the hospital?
76. Suppose a patient is given 155 μg of I-131, a beta emitter with a half-life of 8.0 days. Assuming that none of the I-131 is eliminated from the person's body in the first 4.0 hours of treatment, what is the exposure (in Ci) during those first four hours?

CUMULATIVE PROBLEMS

77. Complete each nuclear equation and calculate the energy change (in J/mol of reactant) associated with each. (Be-9 = 9.012182 amu, Bi-209 = 208.980384 amu, He-4 = 4.002603 amu, Li-6 = 6.015122 amu, Ni-64 = 63.927969 amu, Rg-272 = 272.1535 amu, Ta-179 = 178.94593 amu, and W-179 = 178.94707 amu).
- $\text{_____} + {}^9_4\text{Be} \longrightarrow {}^6_3\text{Li} + {}^4_2\text{He}$
 - ${}^{209}_{83}\text{Bi} + {}^{64}_{28}\text{Ni} \longrightarrow {}^{272}_{111}\text{Rg} + \text{_____}$
 - ${}^{179}_{74}\text{W} + \text{_____} \longrightarrow {}^{179}_{73}\text{Ta}$
78. Complete each nuclear equation and calculate the energy change (in J/mol of reactant) associated with each. (Al-27 = 26.981538 amu, Am-241 = 241.056822 amu, He-4 = 4.002603 amu, Np-237 = 237.048166 amu, P-30 = 29.981801 amu, S-32 = 31.972071 amu, and Si-29 = 28.976495 amu).
- ${}^{27}_{13}\text{Al} + {}^4_2\text{He} \longrightarrow {}^{30}_{15}\text{P} + \text{_____}$
 - ${}^{32}_{16}\text{S} + \text{_____} \longrightarrow {}^{29}_{14}\text{Si} + {}^4_2\text{He}$
 - ${}^{241}_{95}\text{Am} \longrightarrow {}^{237}_{93}\text{Np} + \text{_____}$
79. Write the nuclear equation for the most likely mode of decay for each unstable nuclide.
- Ru-114
 - Ra-216
 - Zn-58
 - Ne-31
80. Write the nuclear equation for the most likely mode of decay for each unstable nuclide.
- Kr-74
 - Th-221
 - Ar-44
 - Nb-85
81. Bismuth-210 is a beta emitter with a half-life of 5.0 days. If a sample contains 1.2 g of Bi-210 (atomic mass = 209.984105 amu), how many beta emissions occur in 13.5 days? If a person's body intercepts 5.5% of those emissions, to what amount of radiation (in Ci) is the person exposed?
82. Polonium-218 is an alpha emitter with a half-life of 3.0 minutes. If a sample contains 55 mg of Po-218 (atomic mass = 218.008965 amu), how many alpha emissions occur in 25.0 minutes? If the polonium is ingested by a person, to what amount of radiation (in Ci) is the person exposed?
83. Radium-226 (atomic mass = 226.025402 amu) decays to radon-224 (a radioactive gas) with a half-life of 1.6×10^3 years. What volume of radon gas (at 25.0°C and 1.0 atm) does 25.0 g of radium produce in 5.0 days? (Report your answer to two significant digits.)
84. In one of the neutron-induced fission reactions of U-235 (atomic mass = 235.043922 amu), the products are Ba-140 and Kr-93 (a radioactive gas). What volume of Kr-93 (at 25.0°C and 1.0 atm) is produced when 1.00 g of U-235 undergoes this fission reaction?

85. When a positron and an electron annihilate one another, the resulting mass is completely converted to energy. Calculate the energy associated with this process in kJ/mol.
86. A typical nuclear reactor produces about 1.0 MW of power per day. What is the minimum rate of mass loss required to produce this much energy?
87. Find the binding energy in an atom of ${}^3\text{He}$, which has a mass of 3.016030 amu.
88. The overall hydrogen burning reaction in stars can be represented as the conversion of four protons to one α particle. Use the data for the mass of H-1 and He-4 to calculate the energy released by this process.
89. The nuclide ${}^{247}\text{Es}$ is made by bombardment of ${}^{238}\text{U}$ in a reaction that emits five neutrons. Identify the bombarding particle.
90. The nuclide ${}^6\text{Li}$ reacts with ${}^2\text{H}$ to form two identical particles. Identify the particles.
91. The half-life of ${}^{238}\text{U}$ is 4.5×10^9 yr. A sample of rock of mass 1.6 g produces 29 dis/s. Assuming all the radioactivity is due to ${}^{238}\text{U}$, find the percent by mass of ${}^{238}\text{U}$ in the rock.
92. The half-life of ${}^{232}\text{Th}$ is 1.4×10^{10} yr. Find the number of disintegrations per hour emitted by 1.0 mol of ${}^{232}\text{Th}$.
93. A 1.50-L gas sample at 745 mm Hg and 25.0°C contains 3.55% radon-220 by volume. Radon-220 is an alpha emitter with a half-life of 55.6 s. How many alpha particles are emitted by the gas sample in 5.00 minutes?
94. A 228-mL sample of an aqueous solution contains 2.35% MgCl_2 by mass. Exactly half of the magnesium ions are Mg-28, a beta emitter with a half-life of 21 hours. What is the decay rate of Mg-28 in the solution after 4.00 days? (Assume a density of 1.02 g/mL for the solution.)
95. When a positron and an electron collide and annihilate each other, two photons of equal energy are produced. Find the wavelength of these photons.
96. The half-life of ${}^{235}\text{U}$, an alpha emitter, is 7.1×10^8 yr. Calculate the number of alpha particles emitted by 1.0 mg of this nuclide in 1.0 minute.
97. Given that the energy released in the fusion of two deuterium atoms to a ${}^3\text{He}$ and a neutron is 3.3 MeV, and in the fusion to tritium and a proton it is 4.0 MeV. Calculate the energy change for the process ${}^3\text{He} + {}^1_0\text{n} \longrightarrow {}^3_1\text{H} + {}^1_1\text{p}$. Suggest an explanation for why this process occurs at much lower temperatures than either of the first two.
98. The nuclide ${}^{18}\text{F}$ decays by both electron capture and β^+ decay. Find the difference in the energy released by these two processes. The atomic masses are ${}^{18}\text{F} = 18.000950$ and ${}^{18}\text{O} = 17.9991598$.

CHALLENGE PROBLEMS

99. The space shuttle carries about 72,500 kg of solid aluminum fuel, which is oxidized with ammonium perchlorate according to the reaction shown here:

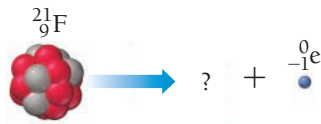
$$10 \text{Al(s)} + 6 \text{NH}_4\text{ClO}_4\text{(s)} \longrightarrow 4 \text{Al}_2\text{O}_3\text{(s)} + 2 \text{AlCl}_3\text{(s)} + 12 \text{H}_2\text{O(g)} + 3 \text{N}_2\text{(g)}$$

The space shuttle also carries about 608,000 kg of oxygen (which reacts with hydrogen to form gaseous water).

 - a. Assuming that aluminum and oxygen are the limiting reactants, determine the total energy produced by these fuels. (ΔH_f° for solid ammonium perchlorate is -295 kJ/mol.)
 - b. Suppose that a future space shuttle is powered by matter-antimatter annihilation. The matter is normal hydrogen (containing a proton and an electron), and the antimatter is antihydrogen (containing an antiproton and a positron). What mass of antimatter is required to produce the energy equivalent of the aluminum and oxygen fuel currently carried on the space shuttle?
100. Suppose that an 85.0-g laboratory animal ingests 10.0 mg of a substance that contained 2.55% by mass Pu-239, an alpha emitter with a half-life of 24,110 years.
 - a. What is the animal's initial radiation exposure in curies?
 - b. If all of the energy from the emitted alpha particles is absorbed by the animal's tissues and if the energy of each emission is 7.77×10^{-12} J, what is the dose in rads to the animal in the first 4.0 hours following the ingestion of the radioactive material? Assuming a biological effectiveness factor of 20, what is the 4.0-hour dose in rems?
101. In addition to the natural radioactive decay series that begins with U-238 and ends with Pb-206, there are natural radioactive decay series that begin with U-235 and Th-232. Both of these series end with nuclides of Pb. Predict the likely end product of each series and the number of a decay steps that occur.
102. The hydride of an unstable nuclide of a Group IIA metal, $\text{MH}_2\text{(s)}$, decays by alpha emission. A 0.025-mol sample of the hydride is placed in an evacuated 2.0-L container at 298 K. After 82 minutes, the pressure in the container is 0.55 atm. Find the half-life of the nuclide.
103. The nuclide ${}^{38}\text{Cl}$ decays by beta emission with a half-life of 37.2 min. A sample of 0.40 mol of H^{38}Cl is placed in a 6.24-L container. After 74.4 min, the pressure is 1650 mmHg. What is the temperature of the container?
104. When BF_3 is bombarded with neutrons, the boron undergoes an α decay, but the F is unaffected. A 0.20-mol sample of BF_3 contained in a 3.0-L container at 298 K is bombarded with neutrons until half of the BF_3 has reacted. What is the pressure in the container at 298 K?

CONCEPTUAL PROBLEMS

105. Closely examine the diagram representing the beta decay of fluorine-21 and draw in the missing nucleus.



106. Approximately how many half-lives must pass for the amount of radioactivity in a substance to decrease to below 1% of its initial level?

107. A person is exposed for 3 days to identical amounts of two different nuclides that emit positrons of roughly equal energy. The half-life of nuclide A is 18.5 days, and the half-life of nuclide B is 255 days. Which of the two nuclides poses the greater health risk?

108. Identical amounts of two different nuclides, an alpha emitter and a gamma emitter, with roughly equal half-lives are spilled in a building adjacent to your bedroom. Which of the two nuclides poses the greater health threat to you while you sleep in your bed? If you accidentally wander into the building and ingest equal amounts of the two nuclides, which one poses the greater health threat?

109. Drugstores in many areas now carry tablets, under such trade names as Iosat and NoRad, to be taken in the event of an accident at a nuclear power plant or a terrorist attack that releases radioactive material. These tablets contain potassium iodide (KI). Can you explain the nature of the protection that they provide?



QUESTIONS FOR GROUP WORK

Active Classroom Learning

Discuss these questions with the group and record your consensus answer.

110. Complete the table of particles involved in radioactive decay.

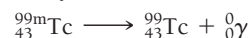
Particle Name	Symbol	Mass Number	Atomic Number or Charge
alpha particle	^4_2He		
	$^{0}_{-1}\text{e}$		-1
gamma ray	$^0_0\gamma$		
positron		0	
	^1_0n	1	
proton	^1_1p		

111. Have each group member study a different mode of radioactive decay (alpha, beta, gamma, positron emission, or electron capture) and present it to the group. Each presentation should include a description of the process, a description of how the atomic and mass numbers change, and at least one specific example. Presentations should also address the questions: What do all types of nuclear reactions have in common, and how do they differ from each other?

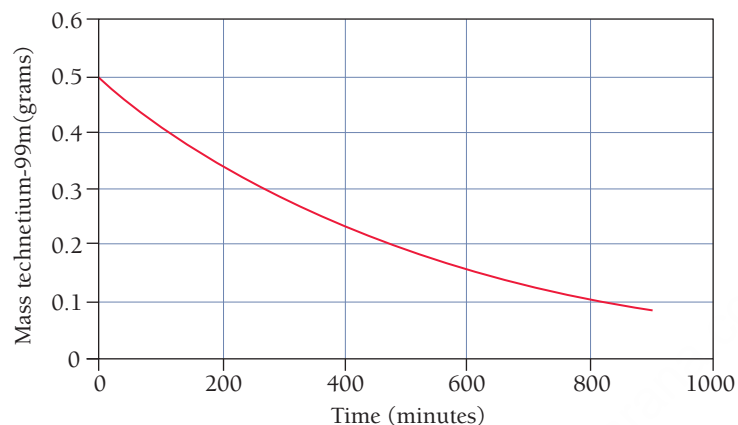
112. Two students were discussing whether or not the total mass changes during a nuclear reaction. The first student insists that mass is conserved. The second student says that mass is converted into energy. Explain the context in which each student is correct and how that fact is applied to solve problems.
113. Write all the balanced nuclear equations for each step of the nuclear decay sequence that starts with U-238 and ends with U-234. Refer to Figure 20.6 for the decay processes involved.
114. Radon-220 undergoes alpha decay with a half-life of 55.6 s. Assume there are 16,000 atoms present initially and make a table showing how many atoms will be present at 0 s, 55.6 s, 111.2 s, 166.8 s, 222.4 s, and 278.0 s (all multiples of the half-life). Now calculate how many atoms will be present at 50 s, 100 s, and 200 s (not multiples of the half-life). Make a graph with the number of atoms present on the y-axis and total time on the x-axis.

DATA INTERPRETATION AND ANALYSIS

115. A common isotope used in medical imaging is technetium-99m, which emits gamma rays.



A sample initially containing 0.500 mg of technetium-99m is monitored as a function of time. Based on its rate of gamma ray emission, a graph, showing the mass of active technetium-99m as a function of time, is prepared. Study the graph and answer the questions that follow.



▲ Mass of Technetium-99m as a Function of Time

- What is the mass of technetium-99m present at 200 minutes? At 400 minutes?
- What is the half-life of technetium-99m in minutes? In hours?
- If a patient is given a $2.0\text{-}\mu\text{g}$ dose of technetium-99m, how much of it is left in the patient's body after 10 hours? (For this problem, assume that the technetium-99m is not biologically removed from the body.)

ANSWERS TO CONCEPTUAL CONNECTIONS

- Cc 20.1 (c) The arrow labeled x represents a decrease of two neutrons and two protons, indicative of alpha decay. The arrow labeled y represents a decrease of one neutron and an increase of one proton, indicative of beta decay.
- Cc 20.2 (b) The half-life is the time it takes for the number of nuclei to decay to one-half of their original number.

- Cc 20.3 (b) 0.10 mol. The sample loses one-half of the number of moles per half-life, so over the course of four half-lives, the amount falls to 0.10 mol.
- Cc 20.4 lawrencium-256
- Cc 20.5 Nuclide A. Because nuclide A has a shorter half-life, more of the nuclides will decay, and therefore produce radiation, before they exit the body.

21.1 Fragrances and Odors 935

21.2 Carbon: Why It Is Unique 936

21.3 Hydrocarbons: Compounds Containing Only Carbon and Hydrogen 937

21.4 Alkanes: Saturated Hydrocarbons 944

21.5 Alkenes and Alkynes 948

21.6 Hydrocarbon Reactions 953

21.7 Aromatic Hydrocarbons 956

21.8 Functional Groups 960

21.9 Alcohols 961

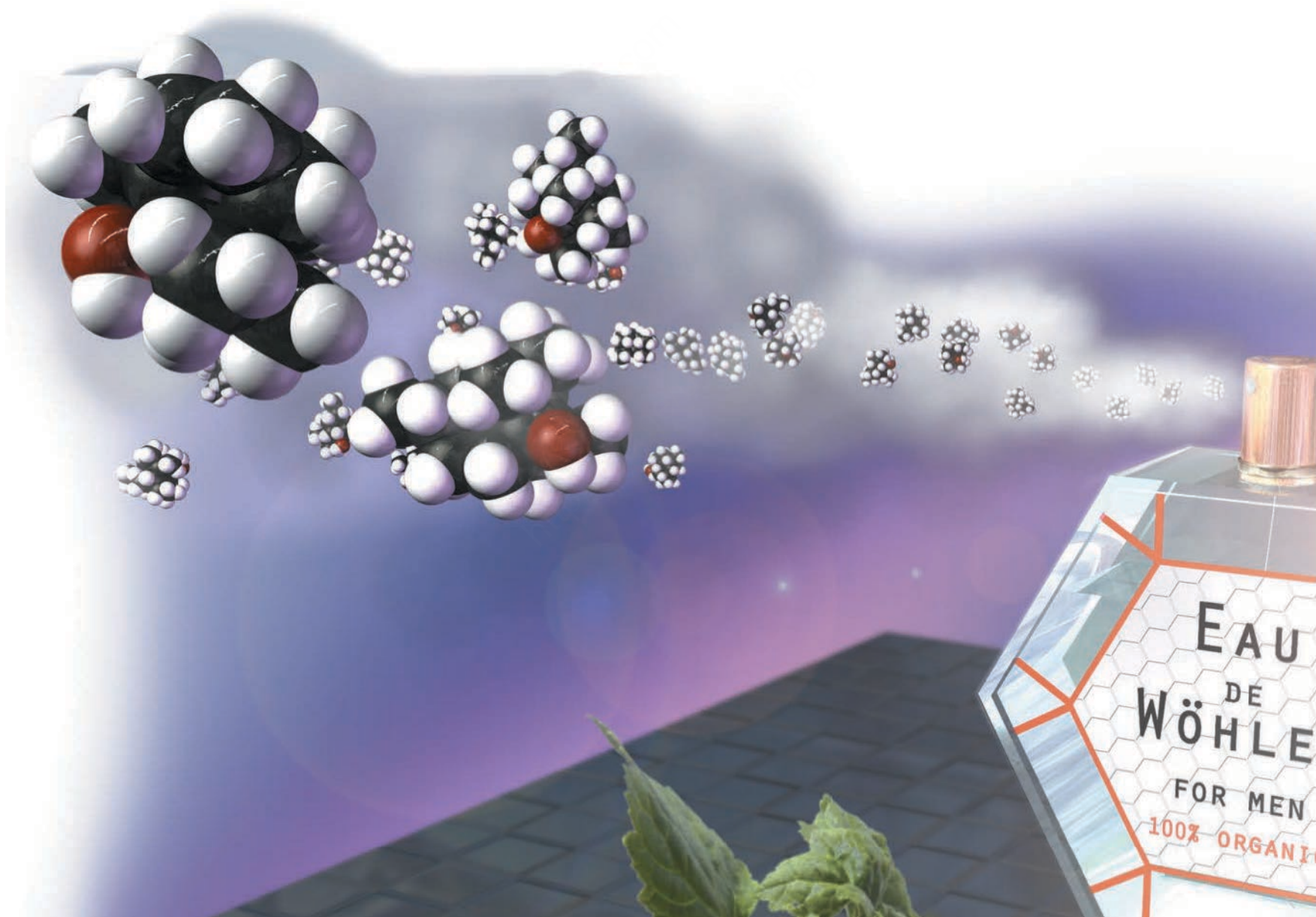
21.10 Aldehydes and Ketones 963

21.11 Carboxylic Acids and Esters 966

21.12 Ethers 968

21.13 Amines 968

Key Learning Outcomes 970



About half of all men's colognes contain at least some patchouli alcohol ($C_{15}H_{26}O$), an organic compound (pictured here) derived from the patchouli plant. Patchouli alcohol has a pungent, musty, earthy fragrance.

Organic Chemistry

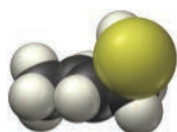
ORGANIC CHEMISTRY IS THE STUDY of carbon-containing compounds. Carbon is unique in the sheer number of compounds that it forms. Millions of organic compounds are known, and researchers discover new ones every day. Carbon is also unique in the diversity of compounds that it forms. In most cases, a fixed number of carbon atoms can combine with a fixed number of atoms of another element to form many different compounds. For example, 10 carbon atoms and 22 hydrogen atoms can form 75 distinctly different compounds. With carbon as the backbone, nature can take the same combination of atoms and bond them together in slightly different ways to produce a huge variety of substances. In organic chemistry, we see the theme that structure determines properties played out over and over again. It is not surprising that life is based on the chemistry of carbon because life needs diversity to exist, and organic chemistry is nothing if not diverse. In this chapter, we peer into Friedrich Wöhler's "primeval tropical forest" (see chapter-opening quotation) and discover the most remarkable things.

"Organic chemistry just now is enough to drive one mad. It gives one the impression of a primeval, tropical forest full of the most remarkable things...."

—Friedrich Wöhler (1800–1882)

21.1 Fragrances and Odors

Have you ever ridden an elevator with someone wearing too much cologne? Or found yourself too close to a skunk? Or caught a whiff of rotting fish? What causes these fragrances and odors? When we inhale certain molecules called *odorants*, they bind with olfactory receptors in our noses. This interaction is largely determined by the kind of structure-dependent lock and key mechanism that we discussed in the beginning of Chapter 5. When an odorant binds to its receptor, a nerve signal is sent to the brain that we experience as a smell. Some smells, such as that of cologne, are pleasant (when not overdone). Other smells, such as that of the skunk or rotting fish, are unpleasant. Our sense of smell helps us identify food, people, and other organisms, and it alerts us to dangers such as polluted air or spoiled food. Smell (*olfaction*) is one way humans and other animals probe the environment around us.



$\text{CH}_3\text{CH}=\text{CHCH}_2\text{SH}$
2-butene-1-thiol



$\begin{array}{c} \text{CH}_3 \\ | \\ \text{CH}_3\text{CHCH}_2\text{CH}_2\text{SH} \end{array}$
3-methyl-1-butanethiol

▲ The smell of skunk is due primarily to the molecules shown here.

Odorants, if they are to reach our noses, must be volatile (easily vaporized). However, many volatile substances have no scent at all. Nitrogen, oxygen, water, and carbon dioxide molecules, for example, constantly pass through our noses, yet they produce no smell because they do not bind to olfactory receptors. Most common smells are caused by **organic molecules**—molecules containing carbon combined with several other elements such as hydrogen, nitrogen, oxygen, and sulfur. Organic molecules are responsible for the smells of roses, vanilla, cinnamon, almond, jasmine, body odor, and rotting fish. When you wander into a rose garden, you experience the sweet smell caused in part by geraniol, an organic compound emitted by roses. Men's colognes often contain patchouli alcohol, an earthy-smelling organic compound extracted from the patchouli plant. If you have been in the vicinity of skunk spray (or have been unfortunate enough to be sprayed yourself), you are familiar with the unpleasant smell of 2-butene-1-thiol and 3-methyl-1-butanethiol, two particularly odoriferous compounds present in the secretion that skunks use to defend themselves.

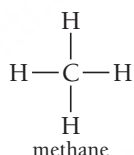
The study of compounds containing carbon combined with one or more of the elements mentioned previously (hydrogen, nitrogen, oxygen, and sulfur), including their properties and their reactions, is known as **organic chemistry**. Besides composing much of what we smell, organic compounds are prevalent in foods, drugs, petroleum products, and pesticides. Organic chemistry is also the basis for living organisms. Life has evolved based on carbon-containing compounds, making organic chemistry of utmost importance to any person interested in understanding living organisms.

21.2 Carbon: Why It Is Unique

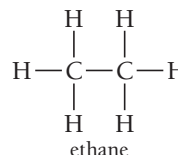
Why did life evolve based on the chemistry of carbon? Why is life not based on some other element? The answer may not be simple, but we do know that life—in order to exist—must entail complexity, and carbon chemistry is clearly complex. The number of compounds containing carbon is greater than the number of compounds containing all of the other elements combined. The reasons for carbon's unique and versatile behavior include its ability to form four covalent bonds, as well as double and triple bonds, and its tendency to *catenate* (that is, to form chains).

Carbon's Tendency to Form Four Covalent Bonds

Carbon—with its four valence electrons—forms four covalent bonds. Consider the Lewis structure and space-filling models of two simple carbon compounds, methane and ethane:



methane



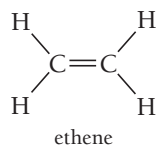
ethane



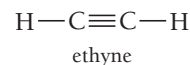
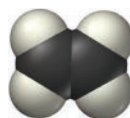
The geometry about a carbon atom forming four single bonds is tetrahedral, as we can see in the figure for methane. Carbon's ability to form four bonds and to form those bonds with a number of different elements results in its potential to form many different compounds. As you learn to draw structures for organic compounds, always remember to draw carbon with four bonds.

Carbon's Ability to Form Double and Triple Bonds

Carbon atoms also form double bonds (trigonal planar geometry) and triple bonds (linear geometry), adding even more diversity to the number of compounds that carbon forms. Consider the Lewis structure and space-filling models of carbon compounds ethene and ethyne:



ethene



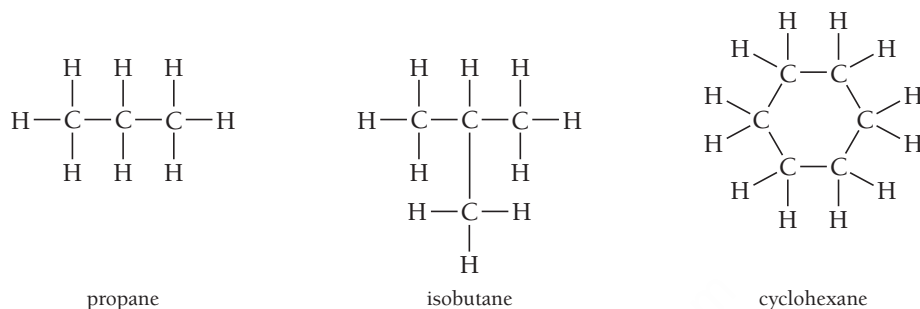
ethyne



In contrast to carbon, silicon (the element in the periodic table with properties closest to that of carbon) does not readily form double or triple bonds because the greater size of silicon atoms results in a Si—Si bond that is too long for much overlap between nonhybridized p orbitals.

Carbon's Tendency to Catenate

Carbon, more than any other element, can bond to itself to form chain, branched, and ring structures as these examples illustrate:

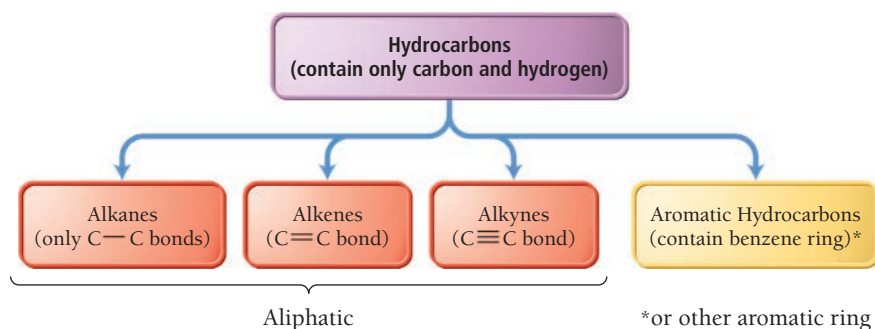


Although other elements can form chains, none surpasses carbon at this ability. Silicon, for example, can form chains with itself. However, silicon's affinity for oxygen (the Si—O bond is stronger than the Si—Si bond) coupled with the prevalence of oxygen in our atmosphere means that silicon-silicon chains are readily oxidized to form silicates (the silicon-oxygen compounds that compose a significant proportion of minerals; see Chapter 12). By contrast, the C—C bond (347 kJ/mol) and the C—O bond (359 kJ/mol) are nearly the same strength, allowing carbon chains to exist relatively peacefully in an oxygen-rich environment. Silicon's affinity for oxygen robs it of the rich diversity that catenation provides to carbon.

21.3 Hydrocarbons: Compounds Containing Only Carbon and Hydrogen

Hydrocarbons—compounds that contain only carbon and hydrogen—are the simplest organic compounds. Because of carbon's versatility, many different kinds of hydrocarbons exist. We use hydrocarbons as fuels. Candle wax, oil, gasoline, LP (liquefied petroleum) gas, and natural gas are all composed of hydrocarbons. Hydrocarbons are also the starting materials in the synthesis of many different consumer products, including fabrics, soaps, dyes, cosmetics, drugs, plastic, and rubber.

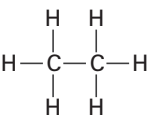
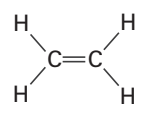
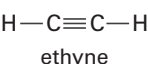
As shown in **Figure 21.1** ▼, we classify hydrocarbons into four different types: **alkanes**, **alkenes**, **alkynes**, and **aromatic hydrocarbons**. Alkanes, alkenes, and alkynes—also called **aliphatic hydrocarbons**—are differentiated based on the kinds of bonds between carbon atoms. (We discuss



▲ **FIGURE 21.1** Four Types of Hydrocarbons

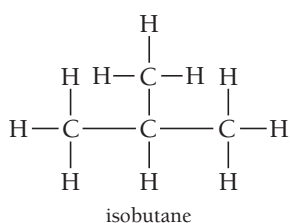
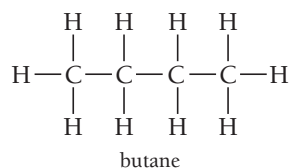
aromatic hydrocarbons in detail in Section 21.7.) As we can see in Table 21.1, alkanes have only single bonds between carbon atoms, alkenes have a double bond, and alkynes have a triple bond.

TABLE 21.1 Alkanes, Alkenes, Alkynes

Type of Hydrocarbon	Type of Bonds	Generic Formula*	Example
Alkane	All single	C_nH_{2n+2}	 ethane
Alkenes	One (or more) double	C_nH_{2n}	 ethene
Alkynes	One (or more) triple	C_nH_{2n-2}	 ethyne

* n is the number of carbon atoms. These formulas apply only to noncyclic structures containing no more than one multiple bond.

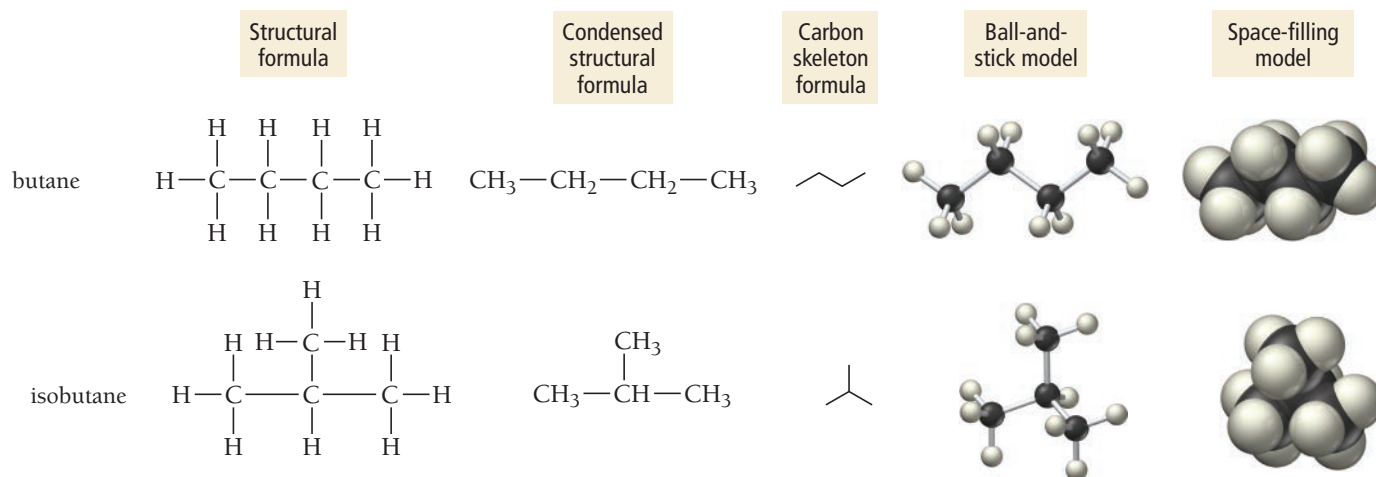
Drawing Hydrocarbon Structures



Throughout this book, we have relied primarily on molecular formulas as the simplest way to represent compounds. In organic chemistry, however, molecular formulas are insufficient because, as we have already discussed, the same atoms can bond together in different ways to form different compounds. For example, consider an alkane with 4 carbon atoms and 10 hydrogen atoms. Two different structures, named butane and isobutane, are shown in the left margin.

Butane and isobutane are **structural isomers**, molecules with the same molecular formula but different structures. More specifically, notice that the atoms are connected together in a different way in isobutane than in butane. Because of their different structures, they have different properties—indeed, they are different compounds. Isomerism is ubiquitous in organic chemistry. Butane has two structural isomers. Pentane (C_5H_{12}) has three, hexane (C_6H_{14}) has five, and decane ($C_{10}H_{22}$) has 75!

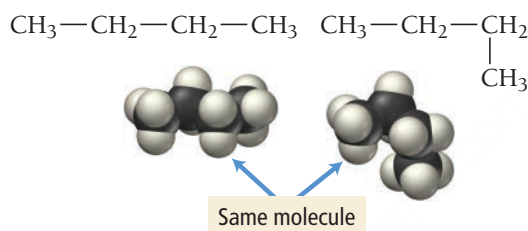
We represent the structure of a particular hydrocarbon with a **structural formula**, a formula that shows not only the numbers of each kind of atom, but also how the atoms are bonded together. Organic chemists use several different kinds of structural formulas. For example, we can represent butane and isobutane in each of the following ways:



The structural formula shows all of the carbon and hydrogen atoms in the molecule and how they are bonded together. The *condensed structural formula* groups the hydrogen atoms with the carbon atom to which they are bonded. Condensed structural formulas may show some of the bonds (as the previous examples do) or none at all. For example, the condensed structural formula for butane can also be written as $\text{CH}_3\text{CH}_2\text{CH}_2\text{CH}_3$. The *carbon skeleton formula* (also called a line formula) shows the carbon-carbon bonds only as lines. Each end or bend of a line represents a carbon atom bonded to as many hydrogen atoms as necessary to form a total of four bonds. Carbon skeleton formulas allow us to draw complex structures quickly.

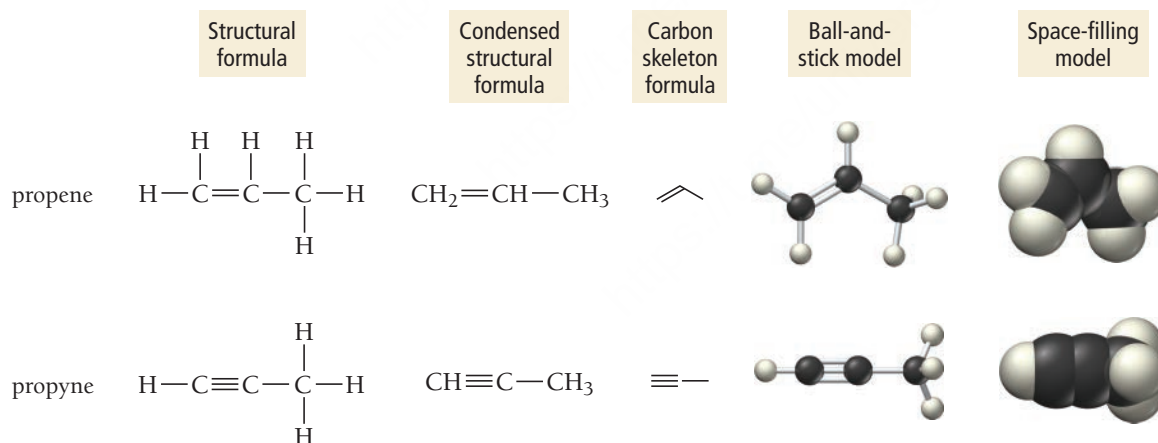
Note that structural formulas are generally not three-dimensional representations of the molecule, as space-filling or ball-and-stick models are. Instead, they are two-dimensional representations that show how atoms are bonded together. As such, the most important feature of a structural formula is the *connectivity* of the atoms, not the exact way the formula is drawn.

For example, consider the two condensed structural formulas for butane and the corresponding space-filling models below them:



Since rotation about single bonds is relatively unhindered at room temperature, the two structural formulas are identical, even though they are drawn differently.

We represent double and triple bonds in structural formulas with double or triple lines. For example, we draw the structural formulas for C_3H_6 (propene) and C_3H_4 (propyne) as follows:

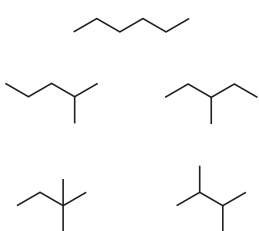


The kind of structural formula we use depends on how much information we want to portray. Example 21.1 illustrates how to write structural formulas for a compound.

EXAMPLE 21.1**Writing Structural Formulas for Hydrocarbons**

Write the structural formulas and carbon skeleton formulas for the five isomers of C_6H_{14} (hexane).

SOLUTION

To begin, draw the carbon backbone of the straight-chain isomer.	$C-C-C-C-C-C$
Determine the carbon backbone structure of the other isomers by arranging the carbon atoms in four other unique ways.	$\begin{array}{cc} C-C-C-C & C-C-C-C \\ & \\ C & C \end{array}$ $\begin{array}{cc} C & C \\ & \\ C-C-C-C & C-C-C-C \\ & \\ C & C \end{array}$
Fill in all the hydrogen atoms so that each carbon forms four bonds.	$\begin{array}{ccccccc} & H & H & H & H & H & H \\ & & & & & & \\ H & -C & -C & -C & -C & -C & -C & -H \\ & & & & & & \\ & H & H & H & H & H & H \end{array}$ $\begin{array}{ccccccc} & H & H & H & H & H & \\ & & & & & & \\ H & -C & -C & -C & -C & -C & -H \\ & & & & & & \\ & H & H & H & H & H & \\ & & & & H-C-H & & \\ & & & & & & \\ & & & & H & & \end{array}$ $\begin{array}{ccccccc} & H & H & H & H & H & \\ & & & & & & \\ H & -C & -C & -C & -C & -C & -H \\ & & & & & & \\ & H & H & H & H & H & \\ & & & & H-C-H & & \\ & & & & & & \\ & & & & H & & \end{array}$ $\begin{array}{ccccccc} & H & H & H & H & H & \\ & & & & & & \\ H & -C & -C & -C & -C & -C & -H \\ & & & & & & \\ & H & H & H & H & H & \\ & & & & H-C-H & & \\ & & & & & & \\ & & & & H & & \end{array}$ $\begin{array}{ccccccc} & H & H & H & H & H & \\ & & & & & & \\ H & -C & -C & -C & -C & -C & -H \\ & & & & & & \\ & H & H & H & H & H & \\ & & & & H-C-H & & \\ & & & & & & \\ & & & & H & & \end{array}$
Write the carbon skeleton formulas by using lines to represent each carbon-carbon bond. Remember that each end or bend represents a carbon atom.	

FOR PRACTICE 21.1

Write the structural formulas and carbon skeleton formulas for the three isomers of C_5H_{12} (pentane).

Organic Structures

21.1

Cc

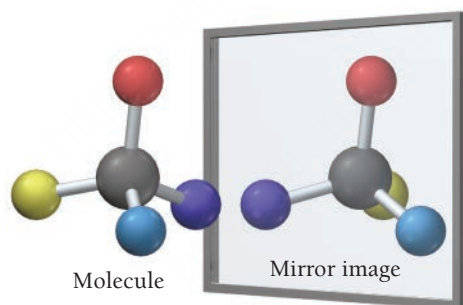
Conceptual
Connection

Which structure is an *isomer* of $\text{CH}_3-\overset{\text{CH}_3}{\underset{|}{\text{CH}}}-\text{CH}_2-\underset{\text{CH}_3}{\underset{|}{\text{CH}}}-\text{CH}_3$ (not just the same structure)?

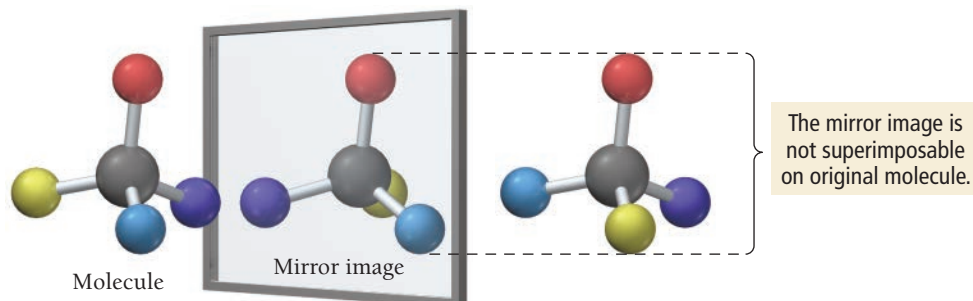
- (a) $\text{CH}_3-\underset{\text{CH}_3}{\underset{|}{\text{CH}}}-\text{CH}_2-\underset{\text{CH}_3}{\underset{|}{\text{CH}}}-\text{CH}_3$
- (b) $\text{CH}_3-\underset{\text{CH}_3}{\underset{|}{\text{CH}}}-\text{CH}_2-\overset{\text{CH}_3}{\underset{|}{\text{CH}}}$
- (c) $\overset{\text{CH}_3}{\underset{|}{\text{CH}}}-\text{CH}_2-\overset{\text{CH}_3}{\underset{|}{\text{CH}}}$
- (d) $\text{CH}_3-\overset{\text{CH}_3}{\underset{|}{\text{CH}}}-\text{CH}_2-\text{CH}_2-\underset{\text{CH}_3}{\underset{|}{\text{CH}_2}}$

Stereoisomerism and Optical Isomerism

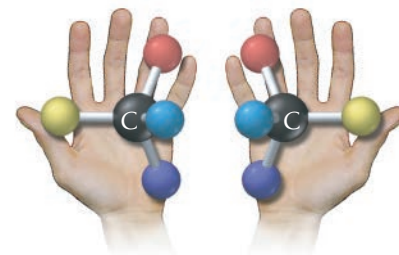
Stereoisomers are molecules in which the atoms have the same connectivity but a different spatial arrangement. We categorize stereoisomers into two types: geometric (or cis–trans) isomers and optical isomers. We discuss geometric isomers in Section 21.5. **Optical isomers** are two molecules that are nonsuperimposable mirror images of one another. Consider the molecule shown here with its mirror image:



The molecule cannot be superimposed onto its mirror image. If we swing the mirror image around to try to superimpose the two, we find that there is no way to get all four substituent atoms to align together. (A substituent is an atom or group of atoms that is substituted for a hydrogen atom in an organic compound.)



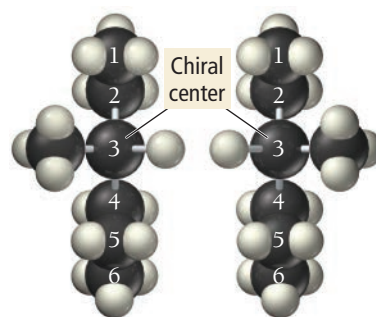
Optical isomers are similar to your right and left hands (**Figure 21.2** ▶). The two are mirror images of one another, but you cannot superimpose one on the other. For this reason, a right-handed glove does not fit on your left hand and vice versa.



▲ **FIGURE 21.2 Mirror Images**

The left and right hands are nonsuperimposable mirror images, just as are optical isomers.

Any carbon atom with four different substituents in a tetrahedral arrangement exhibits optical isomerism. Consider 3-methylhexane:



Optical isomers of 3-methylhexane

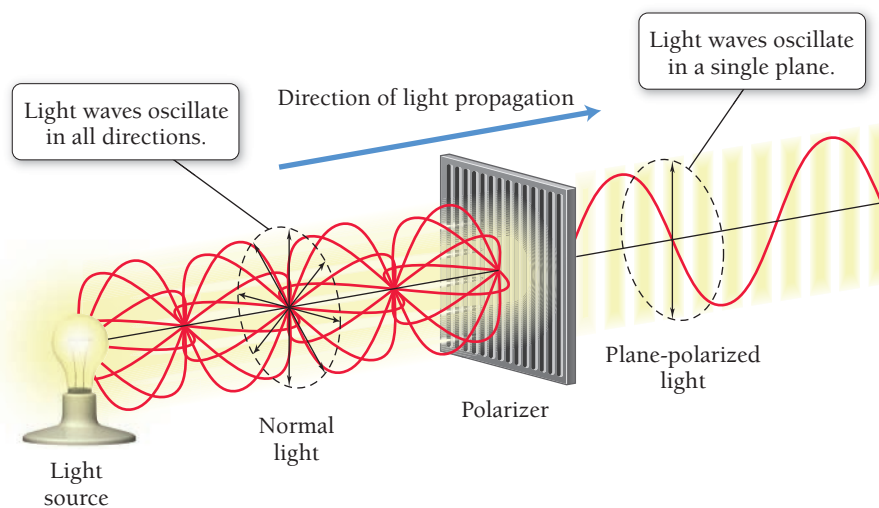
These two 3-methylhexane molecules are nonsuperimposable mirror images and are optical isomers of one another. Optical isomers are also called **enantiomers**. Any molecule, such as 3-methylhexane, that exhibits optical isomerism is said to be **chiral**, from the Greek word *cheir*, which means “hand.”

Optical isomerism is important, not only to organic chemistry, but also to biology and biochemistry. Most biological molecules are chiral and usually only one or the other enantiomer is active in biological systems. For example, glucose, the primary fuel of cells, is chiral. Only one of the enantiomers of glucose has that familiar sweet taste, and only that enantiomer can fuel our cellular functioning; the other enantiomer is not even metabolized by the body.

Some of the physical and chemical properties of enantiomers are indistinguishable from one another. For example, both of the optical isomers of 3-methylhexane have identical freezing points, melting points, and densities. However, the properties of enantiomers differ from one another in two important ways: (1) in the direction in which they rotate polarized light (which is one way to tell them apart) and (2) in their chemical behavior in a chiral environment.

Rotation of Polarized Light Plane-polarized light is light that is made up of electric field waves that oscillate in only one plane as shown in **Figure 21.3** ▼. When a beam of plane-polarized light is directed through a sample containing only one of two optical isomers, the plane of polarization of the light rotates, as shown in **Figure 21.4** ►. One of the two optical isomers rotates the polarization of the light clockwise and is called the **dextrorotatory** isomer (or the *d* isomer). The other isomer rotates the polarization of the light counterclockwise and is called the **levorotatory** isomer (or the *l* isomer). An equimolar mixture of both optical isomers does not rotate the polarization of light at all and is called a **racemic mixture**.

Dextrorotatory means turning clockwise or to the right.
Levorotatory means turning counterclockwise or to the left.



► **FIGURE 21.3 Plane-Polarized Light**
The electric field of plane-polarized light oscillates in one plane.

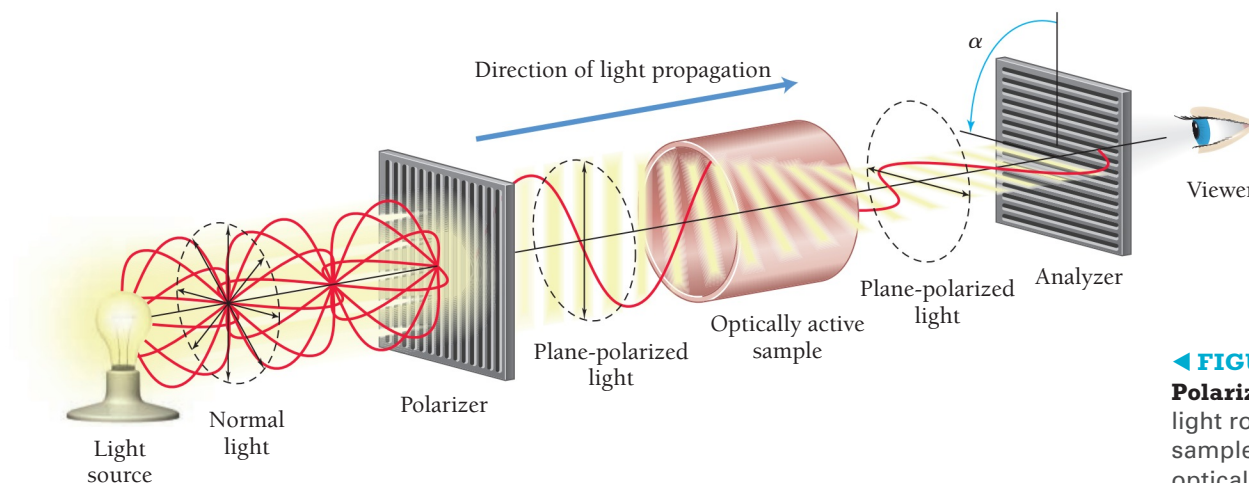
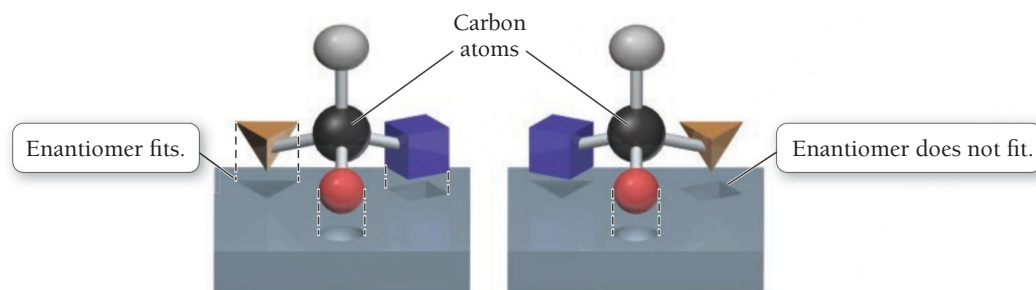


FIGURE 21.4 Rotation of Plane-Polarized Light Plane-polarized light rotates as it passes through a sample containing only one of two optical isomers.

Chemical Behavior in a Chiral Environment Optical isomers also exhibit different chemical behavior when they are in a chiral environment (a chiral environment is one that is not superimposable on its mirror image). Enzymes are large biological molecules that catalyze reactions in living organisms and provide chiral environments. Consider the following simplified picture of two enantiomers in a chiral environment:



As the figure illustrates, one of the enantiomers fits the template, but the other does not, no matter how it is rotated. In this way, an enzyme is able to catalyze the reaction of one enantiomer because that particular enantiomer fits the “template.” As we have already seen, most biological molecules are chiral, and usually only one or the other enantiomer is active in biological systems. Even subtle differences in structure, such as the difference between one enantiomer and the other, affect properties.

Optical Isomers

21.2

Cc

Conceptual
Connection



Which molecule exhibits optical isomerism?

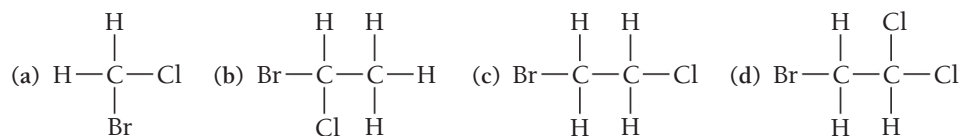
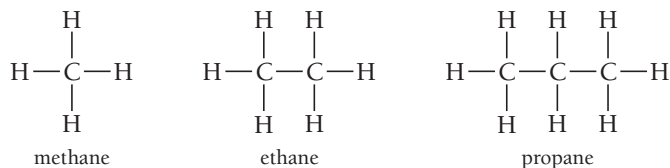


TABLE 21.2 *n*-Alkane Boiling Points

<i>n</i> -Alkane	Boiling Point (°C)
methane	−161.5
ethane	−88.6
propane	−42.1
<i>n</i> -butane	−0.5
<i>n</i> -pentane	36.0
<i>n</i> -hexane	68.7
<i>n</i> -heptane	98.5
<i>n</i> -octane	125.6

21.4 Alkanes: Saturated Hydrocarbons

We often refer to alkanes (hydrocarbons containing only single bonds) as **saturated hydrocarbons** because they are saturated (loaded to capacity) with hydrogen. The simplest hydrocarbons are methane (CH₄), the main component of natural gas; ethane (C₂H₆), a minority component in natural gas; and propane (C₃H₈), the main component of liquid petroleum (LP) gas.



Alkanes containing four or more carbon atoms may be straight or branched (as we have already seen). The straight-chain isomers are often called normal alkanes, or *n*-alkanes. As the number of carbon atoms increases in the *n*-alkanes, so does their boiling point (as shown in Table 21.2). The increase is due to the increasing dispersion force with increasing molar mass (see Section 11.3). Methane, ethane, propane, and *n*-butane are all gases at room temperature, but the next *n*-alkane in the series, pentane, is a liquid at room temperature. Pentane is a component of gasoline.

Table 21.3 summarizes the *n*-alkanes through decane, which contains ten carbon atoms. Like pentane, hexane through decane are all components of gasoline. Table 21.4 summarizes the uses of hydrocarbons.

TABLE 21.3 *n*-Alkanes

<i>n</i>	Name	Molecular Formula C _{<i>n</i>} H _{2<i>n</i>+2}	Structural Formula	Condensed Structural Formula
1	methane	CH ₄	$\begin{array}{c} \text{H} \\ \\ \text{H}-\text{C}-\text{H} \\ \\ \text{H} \end{array}$	CH ₄
2	ethane	C ₂ H ₆	$\begin{array}{c} \text{H} \quad \text{H} \\ \quad \\ \text{H}-\text{C}-\text{C}-\text{H} \\ \quad \\ \text{H} \quad \text{H} \end{array}$	CH ₃ CH ₃
3	propane	C ₃ H ₈	$\begin{array}{c} \text{H} \quad \text{H} \quad \text{H} \\ \quad \quad \\ \text{H}-\text{C}-\text{C}-\text{C}-\text{H} \\ \quad \quad \\ \text{H} \quad \text{H} \quad \text{H} \end{array}$	CH ₃ CH ₂ CH ₃
4	<i>n</i> -butane	C ₄ H ₁₀	$\begin{array}{c} \text{H} \quad \text{H} \quad \text{H} \quad \text{H} \\ \quad \quad \quad \\ \text{H}-\text{C}-\text{C}-\text{C}-\text{C}-\text{H} \\ \quad \quad \quad \\ \text{H} \quad \text{H} \quad \text{H} \quad \text{H} \end{array}$	CH ₃ CH ₂ CH ₂ CH ₃
5	<i>n</i> -pentane	C ₅ H ₁₂	$\begin{array}{c} \text{H} \quad \text{H} \quad \text{H} \quad \text{H} \quad \text{H} \\ \quad \quad \quad \quad \\ \text{H}-\text{C}-\text{C}-\text{C}-\text{C}-\text{C}-\text{H} \\ \quad \quad \quad \quad \\ \text{H} \quad \text{H} \quad \text{H} \quad \text{H} \quad \text{H} \end{array}$	CH ₃ CH ₂ CH ₂ CH ₂ CH ₃
6	<i>n</i> -hexane	C ₆ H ₁₄	$\begin{array}{c} \text{H} \quad \text{H} \quad \text{H} \quad \text{H} \quad \text{H} \quad \text{H} \\ \quad \quad \quad \quad \quad \\ \text{H}-\text{C}-\text{C}-\text{C}-\text{C}-\text{C}-\text{C}-\text{H} \\ \quad \quad \quad \quad \quad \\ \text{H} \quad \text{H} \quad \text{H} \quad \text{H} \quad \text{H} \quad \text{H} \end{array}$	CH ₃ CH ₂ CH ₂ CH ₂ CH ₂ CH ₃

7	<i>n</i> -heptane	C ₇ H ₁₆	$ \begin{array}{ccccccc} \text{H} & \text{H} & \text{H} & \text{H} & \text{H} & \text{H} & \text{H} \\ & & & & & & \\ \text{H}-\text{C}-\text{C}-\text{C}-\text{C}-\text{C}-\text{C}-\text{H} \\ & & & & & & \\ \text{H} & \text{H} & \text{H} & \text{H} & \text{H} & \text{H} & \text{H} \end{array} $	CH ₃ CH ₂ CH ₂ CH ₂ CH ₂ CH ₂ CH ₃
8	<i>n</i> -octane	C ₈ H ₁₈	$ \begin{array}{cccccccc} \text{H} & \text{H} & \text{H} & \text{H} & \text{H} & \text{H} & \text{H} & \text{H} \\ & & & & & & & \\ \text{H}-\text{C}-\text{C}-\text{C}-\text{C}-\text{C}-\text{C}-\text{C}-\text{H} \\ & & & & & & & \\ \text{H} & \text{H} & \text{H} & \text{H} & \text{H} & \text{H} & \text{H} & \text{H} \end{array} $	CH ₃ CH ₂ CH ₂ CH ₂ CH ₂ CH ₂ CH ₂ CH ₃
9	<i>n</i> -nonane	C ₉ H ₂₀	$ \begin{array}{ccccccccc} \text{H} & \text{H} & \text{H} & \text{H} & \text{H} & \text{H} & \text{H} & \text{H} & \text{H} \\ & & & & & & & & \\ \text{H}-\text{C}-\text{C}-\text{C}-\text{C}-\text{C}-\text{C}-\text{C}-\text{C}-\text{H} \\ & & & & & & & & \\ \text{H} & \text{H} & \text{H} & \text{H} & \text{H} & \text{H} & \text{H} & \text{H} & \text{H} \end{array} $	CH ₃ CH ₂ CH ₂ CH ₂ CH ₂ CH ₂ CH ₂ CH ₂ CH ₃
10	<i>n</i> -decane	C ₁₀ H ₂₂	$ \begin{array}{cccccccccc} \text{H} & \text{H} & \text{H} & \text{H} & \text{H} & \text{H} & \text{H} & \text{H} & \text{H} & \text{H} \\ & & & & & & & & & \\ \text{H}-\text{C}-\text{C}-\text{C}-\text{C}-\text{C}-\text{C}-\text{C}-\text{C}-\text{C}-\text{H} \\ & & & & & & & & & \\ \text{H} & \text{H} & \text{H} & \text{H} & \text{H} & \text{H} & \text{H} & \text{H} & \text{H} & \text{H} \end{array} $	CH ₃ CH ₂ CH ₂ CH ₂ CH ₂ CH ₂ CH ₂ CH ₂ CH ₂ CH ₃

TABLE 21.4 Uses of Hydrocarbons

Number of Carbon Atoms	State (at 25 °C)	Major Uses
1–4	Gas	Heating fuel, cooking fuel
5–7	Low-boiling liquid	Solvents, gasoline
6–18	Liquid	Gasoline
12–24	Liquid	Jet fuel, portable-stove fuel
18–50	High-boiling liquid	Diesel fuel, lubricants, heating oil
50+	Solid	Petroleum jelly, paraffin wax

Naming Alkanes

Many organic compounds have common names that we can learn only through familiarity. Because of the sheer number of organic compounds, however, chemists need a systematic method of nomenclature. In this book, we adopt the nomenclature system recommended by the IUPAC (International Union of Pure and Applied Chemistry), which is used throughout the world.

In the IUPAC system, the longest continuous chain of carbon atoms—called the base chain—determines the base name of the compound. The root of the base name depends on the number of carbon atoms in the base chain, as shown in Table 21.5. Base names for alkanes always have the ending *-ane*. Groups of carbon atoms branching off the base chain are alkyl groups and are named as substituents. Recall from Section 21.3 that a *substituent* is an atom or group of atoms that has been substituted for a hydrogen atom in an organic compound. Common alkyl groups are shown in Table 21.6.

TABLE 21.5 Prefixes for Base Names of Alkane Chains

Number of Carbon Atoms	Prefix
1	meth-
2	eth-
3	prop-
4	but-
5	pent-
6	hex-
7	hept-
8	oct-
9	non-
10	dec-

TABLE 21.6 Common Alkyl Groups

Condensed Structural Formula	Name	Condensed Structural Formula	Name
$-\text{CH}_3$	methyl	$\begin{array}{c} -\text{CHCH}_3 \\ \\ \text{CH}_3 \end{array}$	isopropyl
$-\text{CH}_2\text{CH}_3$	ethyl	$\begin{array}{c} -\text{CH}_2\text{CHCH}_3 \\ \\ \text{CH}_3 \end{array}$	isobutyl
$-\text{CH}_2\text{CH}_2\text{CH}_3$	propyl	$\begin{array}{c} -\text{CHCH}_2\text{CH}_3 \\ \\ \text{CH}_3 \end{array}$	sec-butyl
$-\text{CH}_2\text{CH}_2\text{CH}_2\text{CH}_3$	butyl	$\begin{array}{c} \text{CH}_3 \\ \\ -\text{CCH}_3 \\ \\ \text{CH}_3 \end{array}$	tert-butyl

The procedure demonstrated in Examples 21.2 and 21.3 allows us to systematically name many alkanes. The procedure is presented in the left column, and two examples of applying the procedure are shown in the center and right columns.

Interactive Worked
Example Video 21.3



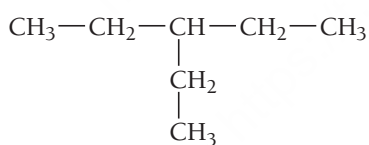
PROCEDURE FOR Naming Alkanes

1. Count the number of carbon atoms in the longest continuous carbon chain to determine the base name of the compound (which may not be the horizontal chain). Locate the prefix corresponding to this number of atoms in Table 21.5 and add the ending *-ane* to form the base name.

EXAMPLE 21.2

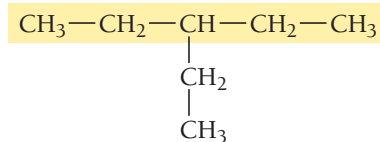
Naming Alkanes

Name this alkane.



SOLUTION

This compound has five carbon atoms in its longest continuous chain.

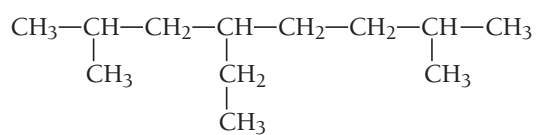


The correct prefix from Table 21.5 is *pent-*. The base name is pentane.

EXAMPLE 21.3

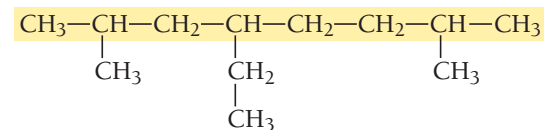
Naming Alkanes

Name this alkane.

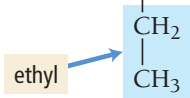
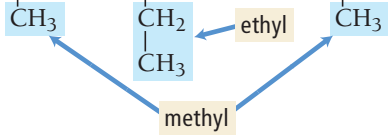

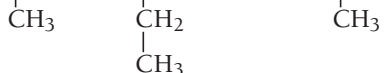




SOLUTION

This compound has eight carbon atoms in its longest continuous chain.



The correct prefix from Table 21.5 is *oct-*. The base name is octane.

<p>2. Consider every branch from the base chain to be a substituent. Name each substituent according to Table 21.6.</p>	<p>This compound has one substituent named <i>ethyl</i>.</p> $\text{CH}_3-\text{CH}_2-\text{CH}-\text{CH}_2-\text{CH}_3$ 	<p>This compound has one substituent named <i>ethyl</i> and two named <i>methyl</i>.</p> $\text{CH}_3-\text{CH}-\text{CH}_2-\text{CH}-\text{CH}_2-\text{CH}_2-\text{CH}-\text{CH}_3$ 
<p>3. Beginning with the end closest to the branching, number the base chain and assign a number to each substituent. (If two substituents occur at equal distances from each end, go to the next substituent to determine from which end to start numbering.)</p>	<p>Number the base chain as follows:</p> $\overset{1}{\text{CH}_3}-\overset{2}{\text{CH}_2}-\overset{3}{\text{CH}}-\overset{4}{\text{CH}_2}-\overset{5}{\text{CH}_3}$  <p>Assign the number 3 to the ethyl substituent.</p>	<p>Number the base chain as follows:</p> $\overset{1}{\text{CH}_3}-\overset{2}{\text{CH}}-\overset{3}{\text{CH}_2}-\overset{4}{\text{CH}}-\overset{5}{\text{CH}_2}-\overset{6}{\text{CH}_2}-\overset{7}{\text{CH}}-\overset{8}{\text{CH}_3}$  <p>Assign the number 4 to the ethyl substituent and the numbers 2 and 7 to the two methyl substituents.</p>
<p>4. Write the name of the compound in the following format: (substituent number)-(substituent name) (base name). If there are two or more substituents, give each one a number and list them alphabetically with hyphens between words and numbers.</p>	<p>The name of the compound is:</p> <p>3-ethylpentane</p>	<p>The basic form of the name of the compound is:</p> <p>4-ethyl-2,7-methyloctane</p> <p>List ethyl before methyl because substituents are listed in alphabetical order.</p>
<p>5. If a compound has two or more identical substituents, indicate the number of identical substituents with the prefix <i>di-</i> (2), <i>tri-</i> (3), or <i>tetra-</i> (4) before the substituent's name. Separate the numbers indicating the positions of the substituents relative to each other with a comma. Do not take the prefixes into account when alphabetizing.</p>	<p>This step does not apply to this compound.</p>	<p>This compound has two methyl substituents; therefore, the name of the compound is:</p> <p>4-ethyl-2,7-dimethyloctane</p>
	<p>FOR PRACTICE 21.2</p> <p>Name this alkane.</p> $\text{CH}_3-\text{CH}_2-\text{CH}-\text{CH}_2-\text{CH}_2-\text{CH}_3$ 	<p>FOR PRACTICE 21.3</p> <p>Name this alkane.</p> $\text{CH}_3-\text{CH}_2-\text{CH}-\text{CH}_2-\text{CH}-\text{CH}_2-\text{CH}_3$ 

EXAMPLE 21.4

Naming Alkanes

Name this alkane. $\text{CH}_3-\underset{\text{CH}_3}{\text{CH}}-\text{CH}_2-\underset{\text{CH}_3}{\text{CH}}-\text{CH}_3$

SOLUTION

1. The longest continuous carbon chain has five atoms. Therefore, the base name is pentane.	$\text{CH}_3-\text{CH}-\text{CH}_2-\text{CH}-\text{CH}_3$ CH_3 CH_3
2. This compound has two substituents, both named methyl.	$\text{CH}_3-\text{CH}-\text{CH}_2-\text{CH}-\text{CH}_3$ CH_3 CH_3 ↙ ↘ methyl
3. Since both substituents are equidistant from the ends, it does not matter from which end you start numbering.	$\overset{1}{\text{CH}_3}-\overset{2}{\underset{\text{CH}_3}{\text{CH}}}-\overset{3}{\text{CH}_2}-\overset{4}{\underset{\text{CH}_3}{\text{CH}}}-\overset{5}{\text{CH}_3}$
4, 5. Use the general form for the name: (substituent number)-(substituent name)(base name) Because this compound contains two identical substituents, Step 5 from the naming procedure applies and you use the prefix <i>di-</i> . Indicate the position of each substituent with a number separated by a comma.	2,4-dimethylpentane

FOR PRACTICE 21.4

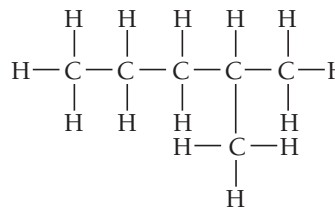
Name this alkane. $\text{CH}_3-\underset{\text{CH}_3}{\text{CH}}-\text{CH}_2-\underset{\text{CH}_3}{\text{CH}}-\underset{\text{CH}_3}{\text{CH}}-\text{CH}_3$

21.3
CcConceptual
Connection

Alkane Base Names

What is the base name of this alkane?

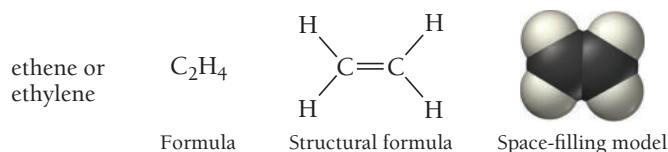
- (a) butane
- (b) pentane
- (c) hexane
- (d) heptane



21.5 Alkenes and Alkynes

Alkenes are hydrocarbons containing at least one double bond between carbon atoms. Alkynes contain at least one triple bond. Because of the double or triple bond, alkenes and alkynes have fewer hydrogen atoms than the corresponding alkanes. They are therefore **unsaturated hydrocarbons** because they are

not loaded to capacity with hydrogen. Recall that noncyclic alkenes have the formula C_nH_{2n} and noncyclic alkynes have the formula C_nH_{2n-2} . The simplest alkene is ethene (C_2H_4), also called ethylene:



The general formulas shown here for alkenes and alkynes assume only one multiple bond.

The geometry about each carbon atom in ethene is trigonal planar (see Example 6.3 for the valence bond model of ethene); this makes ethene a flat, rigid molecule. Ethene is a ripening agent in fruit such as bananas. When a banana within a cluster of bananas begins to ripen, it emits ethene. The ethene causes other bananas in the cluster to ripen. Banana farmers usually pick bananas green for ease of shipping. When the bananas arrive at their destination, they are “gassed” with ethene to initiate ripening. Table 21.7 lists the names and structures of several other alkenes. Most of them do not have familiar uses except as minority components in fuels.



TABLE 21.7 Alkenes

n	Name	Molecular Formula C_nH_{2n}	Structural Formula	Condensed Structural Formula
2	ethene	C_2H_4	$\begin{array}{c} H & & H \\ & \diagdown & / \\ & C = C \\ & / & \diagdown \\ H & & H \end{array}$	$CH_2=CH_2$
3	propene	C_3H_6	$\begin{array}{c} H & & H & H \\ & \diagdown & / & \\ & C = C & - C - H \\ & / & & \\ H & & & H \end{array}$	$CH_2=CHCH_3$
4	1-butene*	C_4H_8	$\begin{array}{c} H & & H & H & H \\ & \diagdown & / & & \\ & C = C & - C - C - H \\ & / & & & \\ H & & & H & H \end{array}$	$CH_2=CHCH_2CH_3$
5	1-pentene*	C_5H_{10}	$\begin{array}{c} H & & H & H & H & H \\ & \diagdown & / & & & \\ & C = C & - C - C - C - H \\ & / & & & & \\ H & & & H & H & H \end{array}$	$CH_2=CHCH_2CH_2CH_3$
6	1-hexene*	C_6H_{12}	$\begin{array}{c} H & & H & H & H & H & H \\ & \diagdown & / & & & & \\ & C = C & - C - C - C - C - H \\ & / & & & & & \\ H & & & H & H & H & H \end{array}$	$CH_2=CHCH_2CH_2CH_2CH_3$

* These alkenes have one or more isomers depending on the position of the double bond. The isomers shown here have the double bond in the 1 position, meaning the first carbon–carbon bond of the chain.

The simplest alkyne is ethyne, C_2H_2 , also known as acetylene:

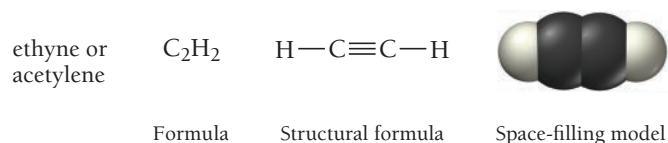


TABLE 22.8 Alkynes

<i>n</i>	Name	Molecular Formula C_nH_{2n-2}	Structural Formula	Condensed Structural Formula
2	ethyne	C_2H_2	$H-C\equiv C-H$	$CH\equiv CH$
3	propyne	C_3H_4	$ \begin{array}{c} H \\ \\ H-C\equiv C-C-H \\ \\ H \end{array} $	$CH\equiv CCH_3$
4	1-butyne*	C_4H_6	$ \begin{array}{c} H \quad H \\ \quad \\ H-C\equiv C-C-C-H \\ \quad \\ H \quad H \end{array} $	$CH\equiv CCH_2CH_3$
5	1-pentyne*	C_5H_8	$ \begin{array}{c} H \quad H \quad H \\ \quad \quad \\ H-C\equiv C-C-C-C-H \\ \quad \quad \\ H \quad H \quad H \end{array} $	$CH\equiv CCH_2CH_2CH_3$
6	1-hexyne*	C_6H_{10}	$ \begin{array}{c} H \quad H \quad H \quad H \\ \quad \quad \quad \\ H-C\equiv C-C-C-C-C-H \\ \quad \quad \quad \\ H \quad H \quad H \quad H \end{array} $	$CH\equiv CCH_2CH_2CH_2CH_3$

* These alkynes have one or more isomers depending on the position of the triple bond. The isomers shown here have the triple bond in the 1 position, meaning the first carbon-carbon bond of the chain.



▲ Welding torches burn ethyne in pure oxygen to produce the very hot flame needed for melting metals.

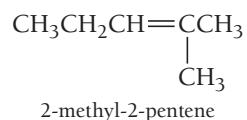
The geometry about each carbon atom in ethyne is linear, making ethyne a linear molecule. Ethyne (or acetylene) is commonly used as fuel for welding torches. Table 21.8 shows the names and structures of several other alkynes. Like alkenes, the alkynes do not have familiar uses other than as minority components of gasoline.

Naming Alkenes and Alkynes

We name alkenes and alkynes in the same way we name alkanes with the following exceptions:

- The base chain is the longest continuous carbon chain *that contains the double or triple bond*.
- The base name has the ending *-ene* for alkenes and *-yne* for alkynes.
- We number the base chain to give the double or triple bond the lowest possible number.
- We insert a number indicating the position of the double or triple bond (lowest possible number) just before the base name.

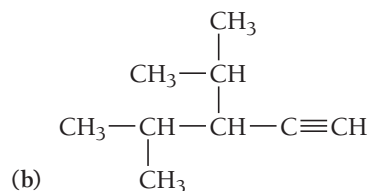
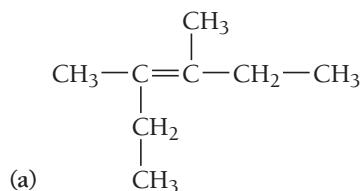
For example, the alkene and alkyne shown here are 2-methyl-2-pentene and 1-butyne:



EXAMPLE 21.5

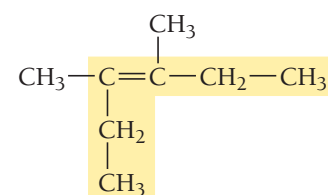
Naming Alkenes and Alkynes

Name each compound.

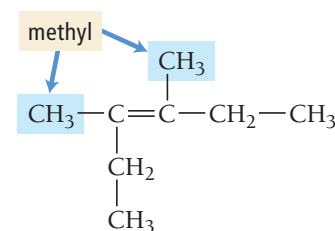


SOLUTION

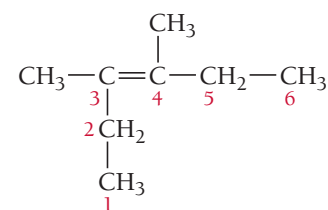
- (a) 1. The longest continuous carbon chain containing the double bond has six carbon atoms. The base name is therefore *hexene*.



2. The two substituents are both methyl.



3. Recall that one of the exceptions listed previously states that, in naming alkenes, you should number the chain so that the double bond has the lowest number. In this case, the *double bond* is equidistant from the ends. Assign the double bond the number 3. The two methyl groups are then at positions 3 and 4.



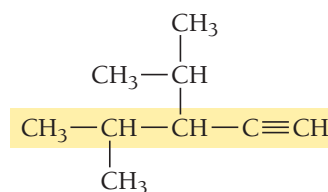
- 4, 5. Use the general form for the name:

(substituent number)-(substituent name)(base name)

Because this compound contains two identical substituents, Step 5 of the naming procedure applies. Use the prefix *di-*. In addition, indicate the position of each substituent with a number separated by a comma. Because this compound is an alkene, specify the position of the double bond, isolated by hyphens, just before the base name.

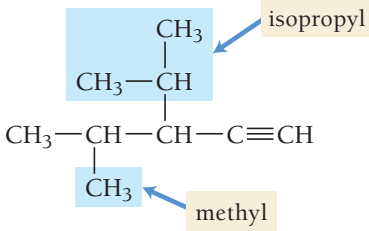
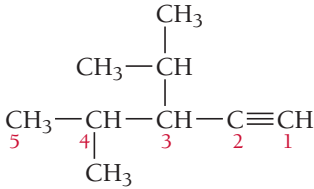
3,4-dimethyl-3-hexene

- (b) 1. The longest continuous carbon chain containing the triple bond is five carbon atoms long; therefore, the base name is *pentyne*.



—Continued on the next page

Continued from the previous page—

2. There are two substituents; one is a methyl group and the other an isopropyl group.	
3. Number the base chain, giving the triple bond the lowest number (1). Assign the isopropyl and methyl groups the numbers 3 and 4, respectively.	
4. Use the general form for the name: (substituent number)-(substituent name)(base name) Since there are two substituents, list both of them in alphabetical order. Since this compound is an alkyne, specify the position of the triple bond with a number isolated by hyphens just before the base name.	3-isopropyl-4-methyl-1-pentyne

FOR PRACTICE 21.5
 Name each compound.

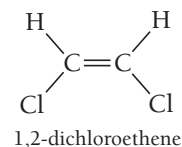
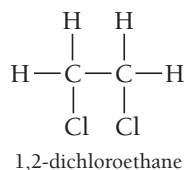
(a) $\text{CH}_3-\text{C}\equiv\text{C}-\underset{\text{CH}_3}{\overset{\text{CH}_3}{\text{C}}}-\text{CH}_3$

(b) $\text{CH}_3-\underset{\text{CH}_3}{\text{CH}}-\text{CH}_2-\underset{\text{CH}_3}{\text{CH}}-\underset{\text{CH}_2}{\overset{\text{CH}_3}{\text{CH}}}-\text{CH}=\text{CH}_2$

Geometric (Cis-Trans) Isomerism in Alkenes

A major difference between a single bond and a double bond is the degree to which rotation occurs about the bond. As discussed in Section 6.3, rotation about a double bond is highly restricted due to the overlap between unhybridized p orbitals on the adjacent carbon atoms.

Consider the difference between 1,2-dichloroethane and 1,2-dichloroethene.



The hybridization of the carbon atoms in 1,2-dichloroethane is sp^3 , resulting in relatively free rotation about the sigma single bond. Consequently, the two structures are identical at room temperature because they quickly interconvert:

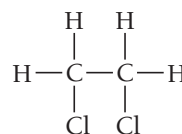
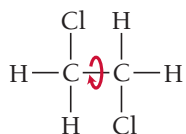
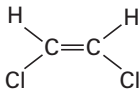

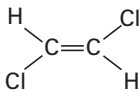
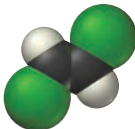
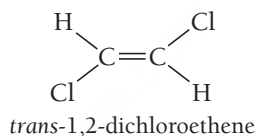
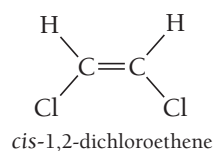


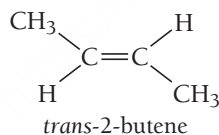
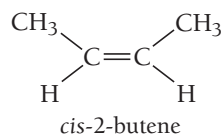
TABLE 21.9 Physical Properties of *cis*- and *trans*-1,2-Dichloroethene

Name	Structure	Space-filling Model	Density (g/mL)	Melting Point (°C)	Boiling Point (°C)
<i>cis</i> -1,2-dichloroethene			1.284	−80.5	60.1
<i>trans</i> -1,2-dichloroethene			1.257	−49.4	47.5

In contrast, rotation about the double bond (sigma + pi) in 1,2-dichloroethene is restricted, so at room temperature, 1,2-dichloroethene exists in two isomeric forms:

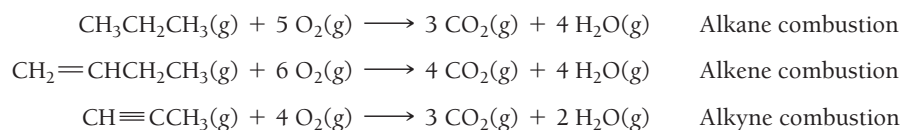


These two forms of 1,2-dichloroethene are different compounds with different properties as shown in Table 21.9. This kind of isomerism is a type of stereoisomerism (see Section 21.3) called **geometric** (or ***cis*–*trans***) **isomerism**. We distinguish between the two isomers with the designations *cis* (meaning “same side”) and *trans* (meaning “opposite sides”). *Cis*–*trans* isomerism is common in alkenes. As another example, consider *cis*- and *trans*-2-butene. Like the two isomers of 1,2-dichloroethene, these two isomers have different physical properties. For example, *cis*-2-butene boils at 3.7°C, and *trans*-2-butene boils at 0.9°C.



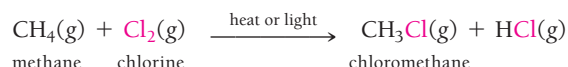
21.6 Hydrocarbon Reactions

One of the most common hydrocarbon reactions is combustion, the burning of hydrocarbons in the presence of oxygen. Hydrocarbon combustion reactions are highly exothermic and are commonly used to warm homes and buildings, to generate electricity, and to power the engines of cars, ships, and airplanes. It is not an exaggeration to say that hydrocarbon combustion makes our current way of life possible. Approximately 90% of the energy produced in the United States is generated by hydrocarbon combustion. Alkanes, alkenes, and alkynes all undergo combustion. In a combustion reaction, the hydrocarbon reacts with oxygen to form carbon dioxide and water:

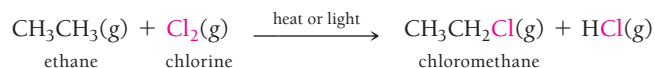


Reactions of Alkanes

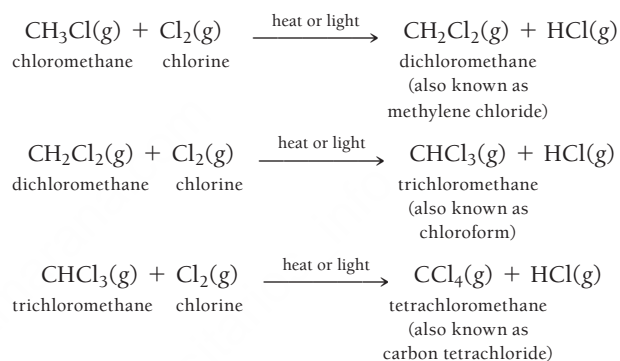
In addition to combustion reactions, alkanes also undergo **substitution reactions**, in which one or more hydrogen atoms on an alkane are replaced by one or more other atoms. The most common substitution reaction is *halogen substitution* (also referred to as *halogenation*). For example, methane can react with chlorine gas in the presence of heat or light to form chloromethane:



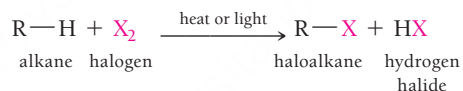
Ethane also reacts with chlorine gas to form chloroethane:



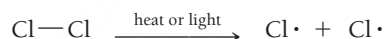
Multiple halogenation reactions can occur because halogens can replace more than one of the hydrogen atoms on an alkane. For example, chloromethane can react with chlorine, and the product of that reaction can react again (and so on):



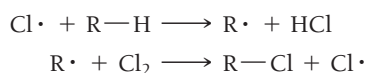
The general form for halogen substitution reactions is:



Notice that the halogenation of hydrocarbons requires initiation with heat or light, which causes the chlorine–chlorine bond to break:



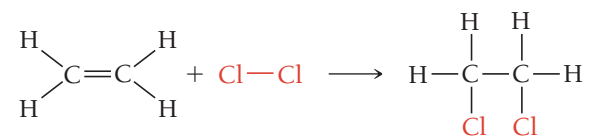
The resulting chlorine atoms are *free radicals* (see Section 5.5), as the dot that represents each chlorine atom's unpaired electron indicates. Chlorine radicals are highly reactive and attack the C—H bond in hydrocarbons. The subsequent reaction proceeds by this mechanism:



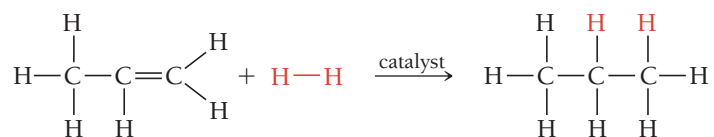
Notice that a chlorine free radical is produced as a product of the last step. This free radical can go on to react again, unless it encounters another chlorine free radical, in which case it reacts with it to re-form Cl_2 .

Reactions of Alkenes and Alkynes

Alkenes and alkynes undergo **addition reactions** in which molecules add across (on either side of) the multiple bond. For example, ethene reacts with chlorine gas to form dichloroethane:

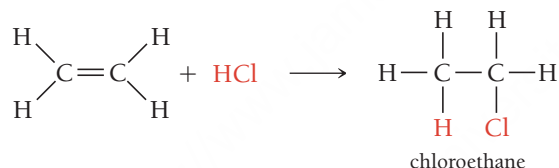


The addition of chlorine converts the carbon–carbon double bond into a single bond because each carbon atom bonds to a chlorine atom. Alkenes and alkynes can also add hydrogen in hydrogenation reactions. For example, in the presence of an appropriate catalyst, propene reacts with hydrogen gas to form propane:

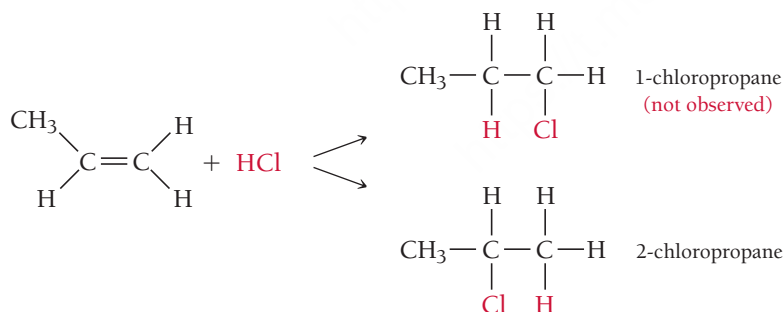


Hydrogenation reactions convert unsaturated hydrocarbons into saturated hydrocarbons. For example, hydrogenation reactions convert unsaturated vegetable oils into saturated fats. Most vegetable oils are unsaturated because their carbon chains contain double bonds. The double bonds put bends into the carbon chains that result in less efficient packing of molecules; thus vegetable oils are liquids at room temperature, while saturated fats are solids at room temperature. When food manufacturers add hydrogen to the double bonds of vegetable oil, the unsaturated fat is converted into a saturated fat, turning the liquid oil into a solid at room temperature. As we have seen so many times, structure determines properties. The words “partially hydrogenated vegetable oil” on a label indicate a food product that contains saturated fats made via hydrogenation reactions.

Alkenes can also add unsymmetrical reagents across the double bond. For example, ethene reacts with hydrogen chloride to form chloroethane:



If the alkene itself is also unsymmetrical, then the addition of an unsymmetrical reagent leads to the potential for two different products. For example, when HCl reacts with propene, two products are possible:



When this reaction is carried out in the lab, however, only the 2-chloropropane forms. We can predict the product of the addition of an unsymmetrical reagent to an unsymmetrical alkene with *Markovnikov's rule*, which states the following:

When a polar reagent is added to an unsymmetrical alkene, the positive end (the least electronegative part) of the reagent adds to the carbon atom that has the most hydrogen atoms.

In most reactions of this type, the positive end of the reagent is hydrogen; therefore, the hydrogen atom bonds to the carbon atom that already contains the most hydrogen atoms.

We often indicate the presence of a catalyst by adding a label over the reaction arrow.

**INGREDIENTS: SOYBEAN OIL, FULLY HYDROGENATED PALM OIL, PARTIALLY HYDROGENATED PALM AND SOYBEAN OILS, MONO AND DIGLYCERIDES, TBHQ AND CITRIC ACID (ANTIOXIDANTS).
MANUFACTURED BY ©/® THE J. M. SMUCKER COMPANY ORRVILLE, OH 44667 U.S.A.**

▲ Partially hydrogenated vegetable oil is a saturated fat that is made by hydrogenating unsaturated fats.

EXAMPLE 21.6

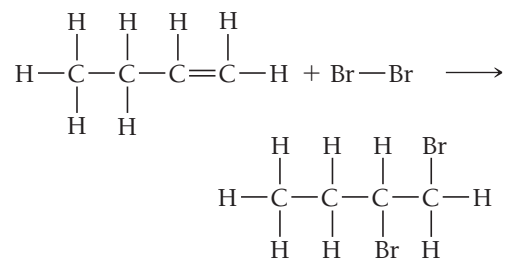
Alkene Addition Reactions

Determine the products of the reactions.

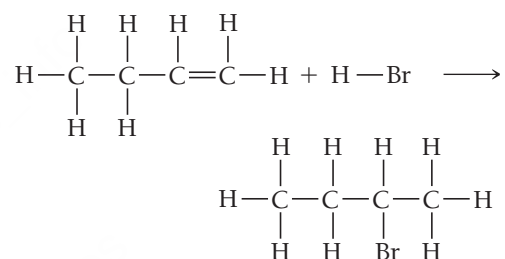
- (a) $\text{CH}_3\text{CH}_2\text{CH}=\text{CH}_2 + \text{Br}_2 \longrightarrow$
 (b) $\text{CH}_3\text{CH}_2\text{CH}=\text{CH}_2 + \text{HBr} \longrightarrow$

SOLUTION

- (a) The reaction of 1-butene with bromine is an example of a symmetric addition. The bromine adds across the double bond, and each carbon forms a single bond to a bromine atom.

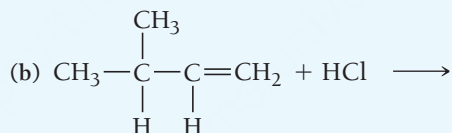
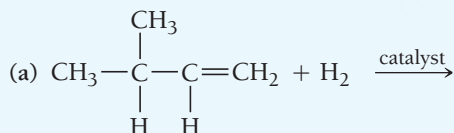


- (b) The reaction of 1-butene with hydrogen bromide is an example of an unsymmetrical addition. Apply Markovnikov's rule to determine which carbon the hydrogen bonds with and which carbon the bromine atom bonds with. Markovnikov's rule predicts that the hydrogen bonds to the end carbon in this case.



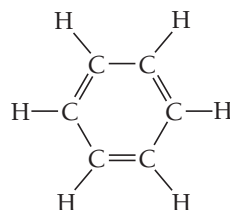
FOR PRACTICE 21.6

Determine the products of the reactions.

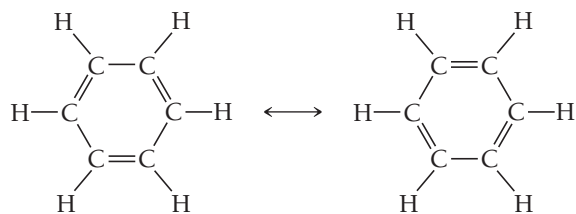


21.7 Aromatic Hydrocarbons

As you might imagine, determining the structure of organic compounds has not always been easy. During the mid-1800s, chemists were working to determine the structure of a particularly stable organic compound named benzene (C_6H_6). In 1865, Friedrich August Kekulé (1829–1896) had a dream in which he envisioned chains of carbon atoms as snakes. The snakes danced before him, and one of them twisted around and bit its tail. Based on that vision, Kekulé proposed the following structure for benzene:



This structure has alternating single and double bonds. When we examine the carbon–carbon bond lengths in benzene, however, we find that all the bonds are the same length, which indicates that the following resonance structures are a more accurate representation of benzene:



Recall from Section 5.4 that the actual structure of a molecule represented by resonance structures is intermediate between the two resonance structures and is called a *resonance hybrid*.

The true structure of benzene is a hybrid of the two resonance structures. We often represent benzene with the following carbon skeletal formula (or line formula):



The ring represents the delocalized π electrons that occupy the molecular orbital shown superimposed on the ball-and-stick model. When drawing benzene rings, either by themselves or as parts of other compounds, organic chemists use either this diagram or just one of the resonance structures with alternating double bonds. Both representations indicate the same thing—a benzene ring.

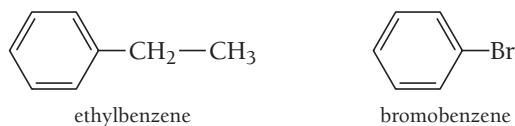
The benzene ring structure occurs in many organic compounds. An atom or group of atoms can substitute for one or more of the six hydrogen atoms on the ring to form compounds referred to as *substituted benzenes*, such as chlorobenzene and phenol.



Because many compounds containing benzene rings have pleasant aromas, benzene rings are also called *aromatic rings*, and compounds containing them are called *aromatic compounds*. Aromatic compounds are responsible for the pleasant smells of cinnamon, vanilla, and jasmine.

Naming Aromatic Hydrocarbons

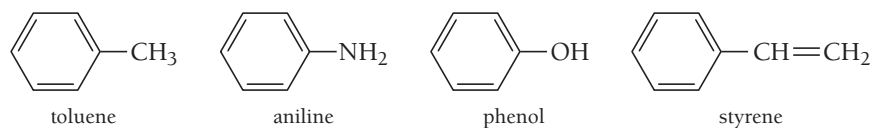
Monosubstituted benzenes—benzenes in which only one of the hydrogen atoms has been substituted—are often named as derivatives of benzene.



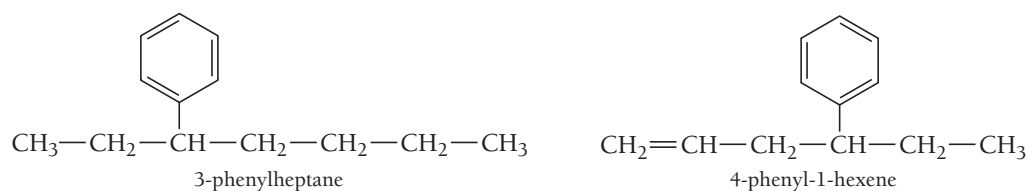
These names take the general form:

(name of substituent)benzene


However, many monosubstituted benzenes have names that can only be learned through familiarity. Some common ones are shown here:



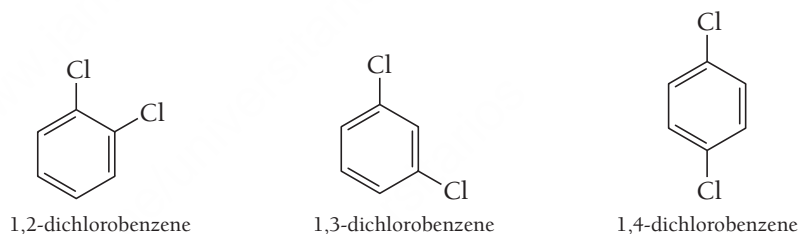
We name some substituted benzenes, especially those with large substituents, by treating the benzene ring as the substituent. In these cases, we refer to the benzene substituent as a **phenyl group**.



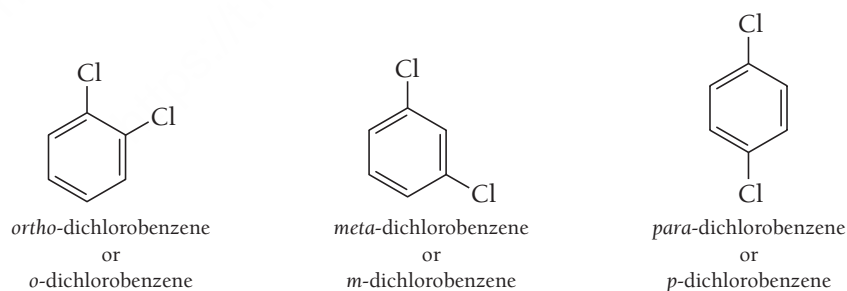
Disubstituted benzenes—benzenes in which two hydrogen atoms have been substituted—are numbered, and the substituents are listed alphabetically. We determine the order of numbering on the ring by the alphabetical order of the substituents.



When the two substituents are identical, we use the prefix *di*:-



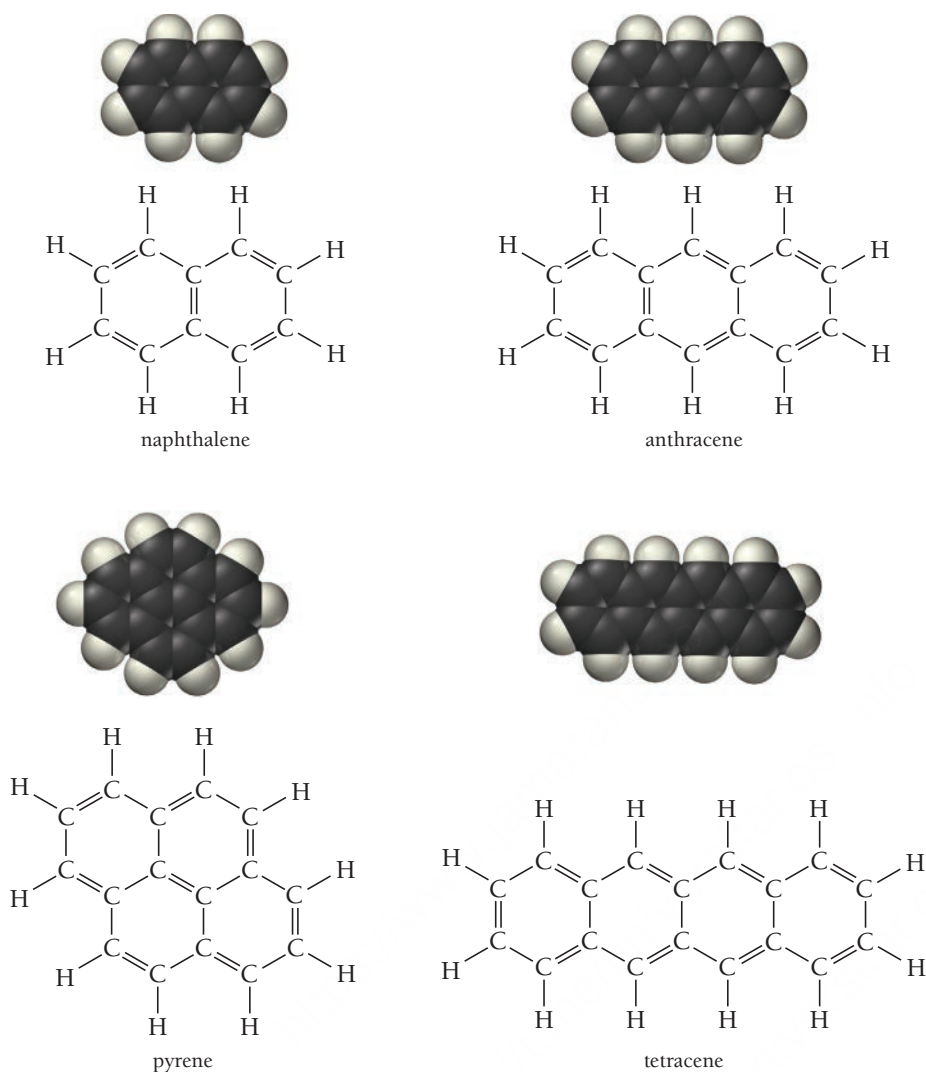
Also in common use, in place of numbering, are the prefixes *ortho* (1,2 disubstituted), *meta* (1,3 disubstituted), and *para* (1,4 disubstituted):



Compounds containing fused aromatic rings (rings with one or more shared sides) are called *polycyclic aromatic hydrocarbons*. Some common examples (shown in **Figure 21.5**) include naphthalene, the substance that composes mothballs, and pyrene, a carcinogen found in cigarette smoke.

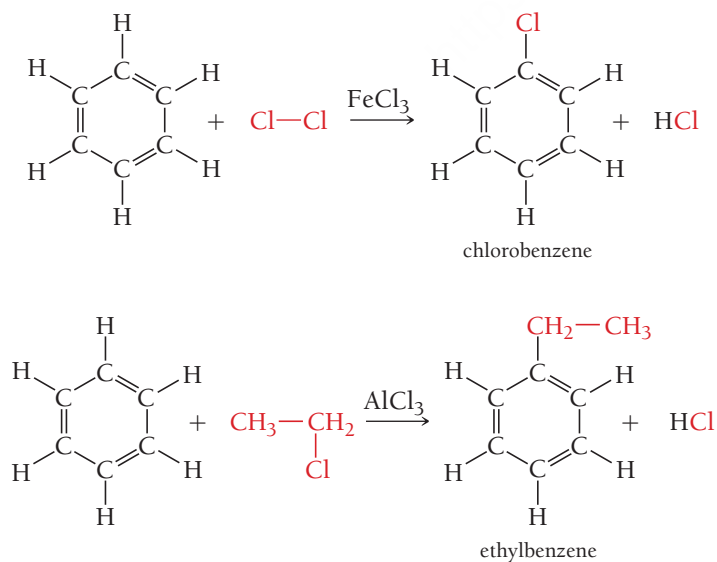
Reactions of Aromatic Compounds

We might expect benzene to react similarly to the alkenes, readily undergoing addition reactions across its double bonds. However, because of electron delocalization around the ring and the resulting greater stability, benzene does not typically undergo addition reactions. Instead, benzene undergoes



◀ **FIGURE 21.5 Polycyclic Aromatic Compounds** The structures of some common polycyclic aromatic compounds contain fused rings.

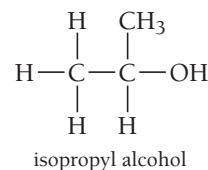
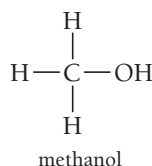
substitution reactions in which the hydrogen atoms are replaced by other atoms or groups of atoms as shown in these examples:



The substances shown over the arrows are catalysts needed to increase the rate of the reaction.

21.8 Functional Groups

Most other families of organic compounds are hydrocarbons with a **functional group**—a characteristic atom or group of atoms—inserted into the hydrocarbon. A group of organic compounds that all have the same functional group is a *family*. For example, the members of the family of alcohols each have an —OH functional group and the general formula $R-OH$, where R represents a hydrocarbon group. (That is, we refer to the hydrocarbon group as an “ R group.”) Some specific examples include methanol and isopropyl alcohol (also known as rubbing alcohol):



The presence of a functional group in a hydrocarbon alters the properties of the compound significantly. For example, methane is a nonpolar gas. By contrast, methanol—methane with an —OH group substituted for one of the hydrogen atoms—is a polar, hydrogen-bonded liquid at room temperature. Although each member of a family is unique and different, their common functional group causes some similarities in both their physical and chemical properties. Table 21.10 lists some common functional groups, their general formulas, and an example of each.

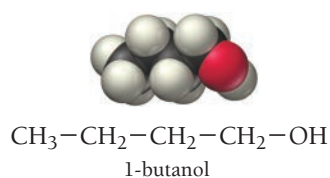
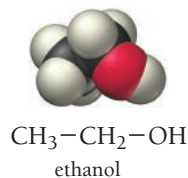
TABLE 21.10 Some Common Functional Groups

Family	General Formula*	Condensed General Formula	Example	Name
Alcohols	$R-OH$	ROH	CH_3CH_2OH	ethanol (ethyl alcohol)
Ethers	$R-O-R$	ROR	CH_3OCH_3	dimethyl ether
Aldehydes	$\begin{array}{c} \text{O} \\ \\ R-C-H \end{array}$	$RCHO$	$\begin{array}{c} \text{O} \\ \\ CH_3-C-H \end{array}$	ethanal (acetaldehyde)
Ketones	$\begin{array}{c} \text{O} \\ \\ R-C-R \end{array}$	$RCOR$	$\begin{array}{c} \text{O} \\ \\ CH_3-C-CH_3 \end{array}$	propanone (acetone)
Carboxylic acids	$\begin{array}{c} \text{O} \\ \\ R-C-OH \end{array}$	$RCOOH$	$\begin{array}{c} \text{O} \\ \\ CH_3-C-OH \end{array}$	ethanoic acid (acetic acid)
Esters	$\begin{array}{c} \text{O} \\ \\ R-C-OR \end{array}$	$RCOOR$	$\begin{array}{c} \text{O} \\ \\ CH_3-C-OCH_3 \end{array}$	methyl acetate
Amines	$\begin{array}{c} R \\ \\ R-N-R \end{array}$	R_3N	$\begin{array}{c} H \\ \\ CH_3CH_2-N-H \end{array}$	ethylamine

*In ethers, ketones, esters, and amines, the R groups may be the same or different.

21.9 Alcohols

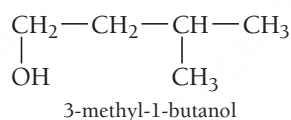
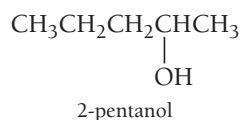
As we discussed in Section 21.8, **alcohols** are organic compounds containing the —OH functional group, or **hydroxyl group**, and they have the general formula R—OH . In addition to methanol and isopropyl alcohol, ethanol and 1-butanol are also common alcohols:



Naming Alcohols

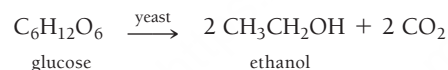
The names of alcohols are like the names of alkanes with the following differences:

- The base chain is the longest continuous carbon chain that contains the —OH functional group.
- The base name has the ending *-ol*.
- We number the base chain to assign the —OH group the lowest possible number.
- We insert a number indicating the position of the —OH group just before the base name. For example:



About Alcohols

The familiar alcohol in alcoholic beverages, ethanol, is most commonly formed by the yeast fermentation of sugars, such as glucose, from fruits and grains:




Alcoholic beverages contain ethanol, water, and a few other components that impart flavor and color. Beer usually contains 3–6% ethanol. Wine contains about 12–14% ethanol, and spirits—beverages such as whiskey, rum, or tequila—range from 40% to 80% ethanol, depending on their *proof*. The proof of an alcoholic beverage is twice the percentage of its ethanol content, so an 80-proof whiskey contains 40% ethanol. Ethanol is used as a gasoline additive because it increases the octane rating of gasoline and fosters its complete combustion, reducing the levels of certain pollutants such as carbon monoxide and the precursors of ozone.

Isopropyl alcohol (or 2-propanol) is available at any drugstore under the name of rubbing alcohol. It is commonly used as a disinfectant for wounds and to sterilize medical instruments. Isopropyl alcohol should never be consumed internally, as it is highly toxic. Four ounces of isopropyl alcohol can cause death. A third common alcohol is methanol, also called wood alcohol. Methanol is commonly used as a laboratory solvent and as a fuel additive. Like isopropyl alcohol, methanol is toxic and should never be consumed.

Alcohol Reactions

Alcohols undergo a number of reactions including substitution, elimination (or dehydration), and oxidation. Alcohols also react with active metals to form strong bases.

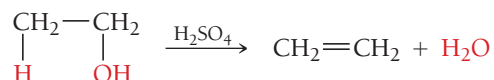
Substitution Alcohols react with acids such as HBr to form halogenated hydrocarbons.



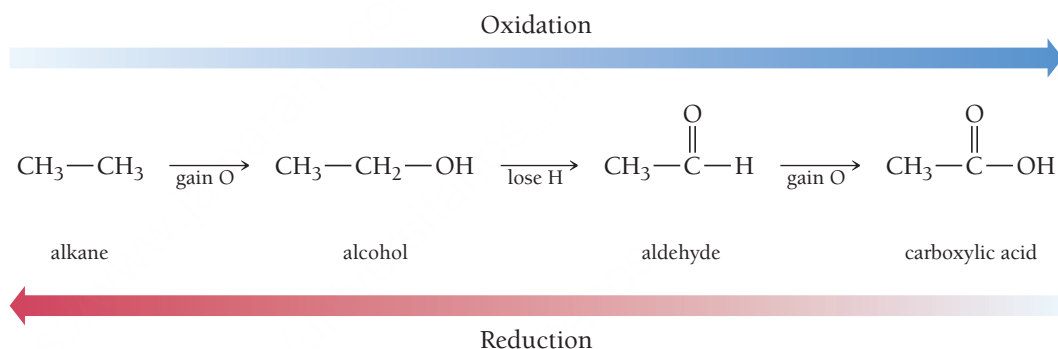
In these reactions, the halogen replaces the hydroxyl group on the alcohol. For example, ethanol reacts with hydrobromic acid to form bromoethane and water:



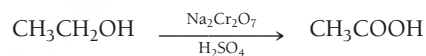
Elimination (or Dehydration) In the presence of concentrated acids such as H_2SO_4 , alcohols react and eliminate water, forming alkenes. These kinds of reactions are known as **elimination reactions**. For example, ethanol eliminates water to form ethene according to the reaction:



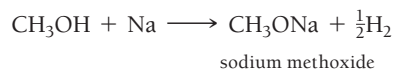
Oxidation In organic chemistry, we think of oxidation and reduction in terms of the changes to the carbon atoms in the molecule. Thus, oxidation is the gaining of oxygen or the losing of hydrogen by a carbon atom. Reduction is the loss of oxygen or the gaining of hydrogen by a carbon atom. We can draw a series showing relative states of oxidation:



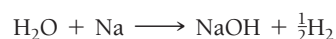
In this view, an alcohol is a partially oxidized hydrocarbon; it can be further oxidized to form an aldehyde or carboxylic acid, or it can be reduced to form a hydrocarbon (but this is rare). For example, ethanol can be oxidized to acetic acid according to the reaction:



Reaction with Active Metals Alcohols react with active metals, such as sodium, much as water does. For example, methanol reacts with sodium to form *sodium methoxide* and hydrogen gas:



The reaction of *water* with sodium produces *sodium hydroxide* and hydrogen gas:

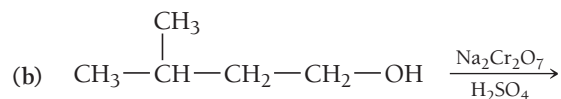
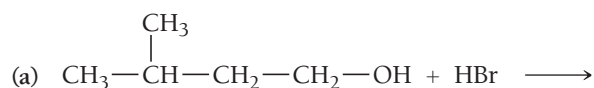


In both cases, a strong base forms (OH^- in the case of water and CH_3O^- in the case of methanol).

EXAMPLE 21.7

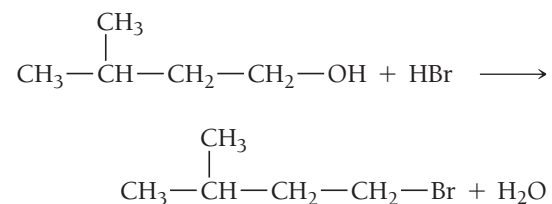
Alcohol Reactions

Determine the type of reaction (substitution, dehydration, oxidation, or reaction with an active metal) that occurs in each case, and write formulas for the products.

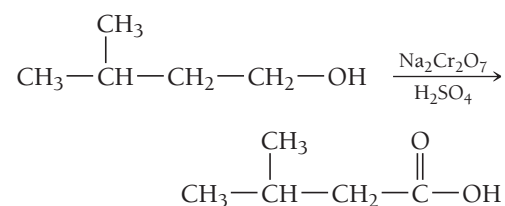


SOLUTION

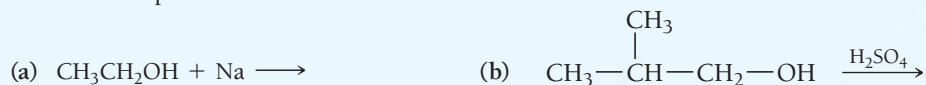
- (a) An alcohol reacting with an acid is an example of a *substitution reaction*. The product of the substitution reaction is a halogenated hydrocarbon and water.



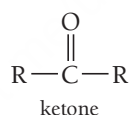
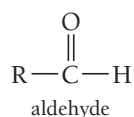
- (b) An alcohol in solution with sodium dichromate and acid undergoes an *oxidation reaction*. The product of the oxidation reaction is a carboxylic acid functional group. (We discuss carboxylic acid functional groups in detail in Section 21.11.)

**FOR PRACTICE 21.7**

Determine the type of reaction (substitution, dehydration, oxidation, or reaction with an active metal) that occurs in each case, and write formulas for the products.

**21.10 Aldehydes and Ketones**

Aldehydes and **ketones** (shown in **Figure 21.6 ▼**) have the following general formulas:



The condensed structural formula for aldehydes is RCHO; for ketones it is RCOR.

The functional group for both aldehydes and ketones is the **carbonyl group**:



Ketones have an R group attached to both sides of the carbonyl, while aldehydes have one R group and a hydrogen atom. (An exception is formaldehyde, which is an aldehyde with two H atoms bonded to the carbonyl group.)

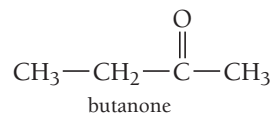
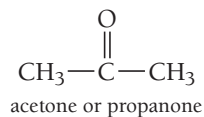
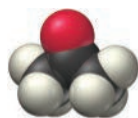
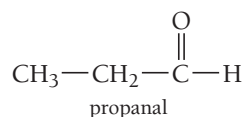
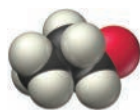
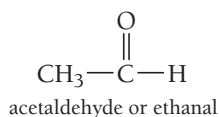
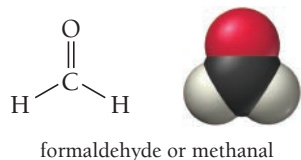
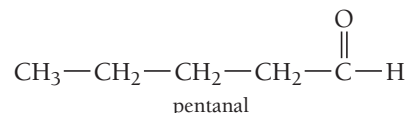
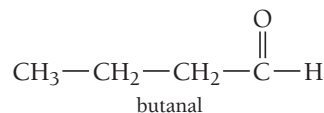


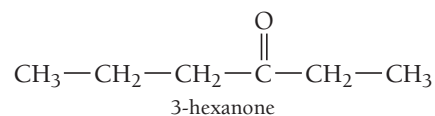
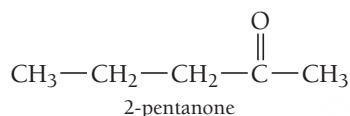
FIGURE 21.6 Common Aldehydes and Ketones

Naming Aldehydes and Ketones

Many aldehydes and ketones have common names that we can learn only by becoming familiar with them, but we can systematically name simple aldehydes according to the number of carbon atoms in the longest continuous carbon chain that contains the carbonyl group. We form the base name from the name of the corresponding alkane by dropping the *-e* and adding the ending *-al*:

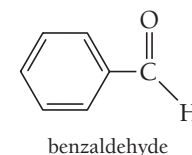
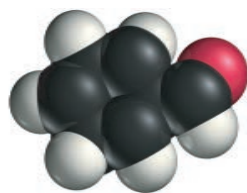
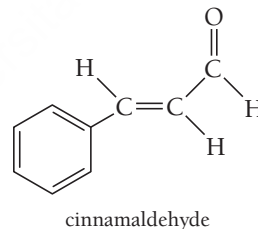
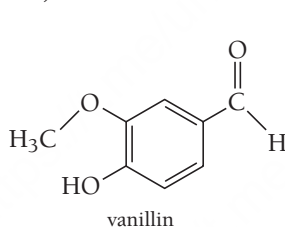


We name simple ketones according to the longest continuous carbon chain containing the carbonyl group, forming the base name from the name of the corresponding alkane by dropping the letter *-e* and adding the ending *-one*. For ketones, we number the chain to give the carbonyl group the lowest possible number:



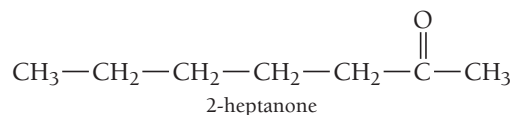
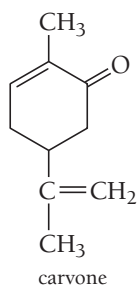
About Aldehydes and Ketones

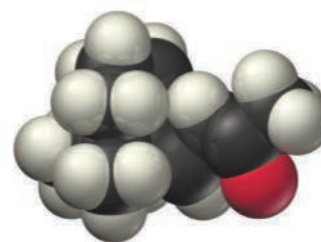
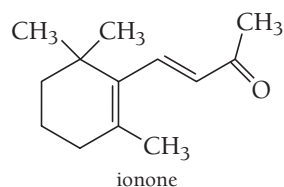
The most familiar aldehyde is probably formaldehyde, shown earlier in this section. Formaldehyde is a gas with a pungent odor. It is often mixed with water to make *formalin*, a preservative and disinfectant. Formaldehyde is also found in wood smoke, which is one reason smoking is an effective method of food preservation—the formaldehyde kills bacteria. Aromatic aldehydes, those that also contain an aromatic ring, have pleasant aromas. For example, vanillin causes the smell of vanilla, cinnamaldehyde is the sweet-smelling component of cinnamon, and benzaldehyde accounts for the smell of almonds (**Figure 21.7** ▼).



► **FIGURE 21.7 The Nutty Aroma of Almonds** Benzaldehyde is partly responsible for the smell of almonds.

The most familiar ketone is acetone, the main component of nail polish remover. Other ketones have more pleasant aromas. For example, carvone is largely responsible for the smell of spearmint, 2-heptanone (among other compounds) for the smell of cloves, and ionone for the smell of raspberries (**Figure 21.8** ►).

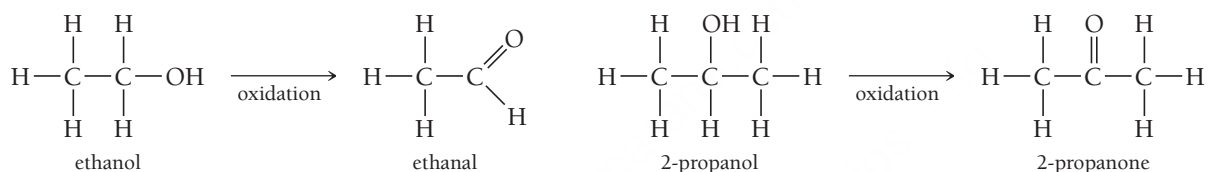




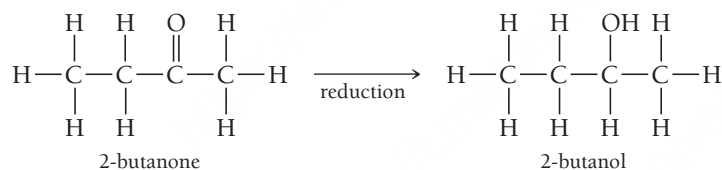
▲ **FIGURE 21.8 The Fragrance of Raspberries** Ionone is partly responsible for the smell of raspberries.

Aldehyde and Ketone Reactions

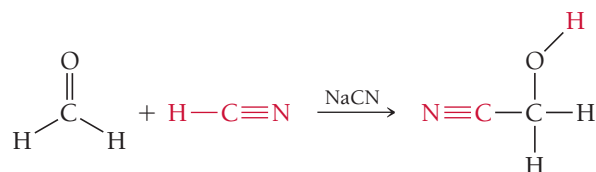
Aldehydes and ketones can form from the *oxidation* of alcohols. For example, ethanol can be oxidized to ethanal, and 2-propanol can be oxidized to 2-propanone (or acetone):




In the reverse reaction, an aldehyde or ketone is reduced to an alcohol. For example, 2-butanone can be reduced to 2-butanol in the presence of a reducing agent:



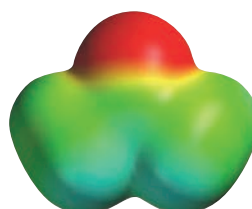
The carbonyl group in aldehydes and ketones is unsaturated, much like the double bond in an alkene. Because of this feature, the most common reactions of aldehydes and ketones are addition reactions. However, in contrast to the carbon-carbon double bond in alkenes, which is nonpolar, the double bond in the carbonyl group is highly polar (**Figure 21.9** ▼). Consequently, additions across the double bond result in the more electronegative part of the reagent bonding to the carbon atom and the less electronegative part (often hydrogen) bonding to the oxygen atom. For example, HCN adds across the carbonyl double bond in formaldehyde.



formaldehyde



acetaldehyde



acetone

◀ **FIGURE 21.9 Electrostatic Potential Maps of the Carbonyl Group**

Members of the carbonyl group are highly polar, as shown in these plots of electrostatic potential.

21.11 Carboxylic Acids and Esters

The condensed structural formula for carboxylic acids is RCOOH ; for esters it is RCOOR .

Carboxylic acids and **esters** have the general formulas:

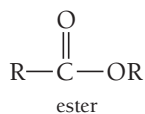
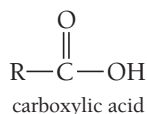
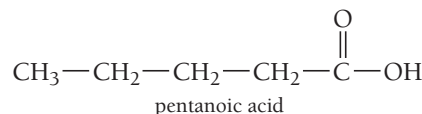
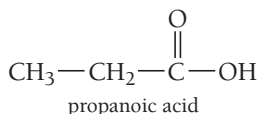


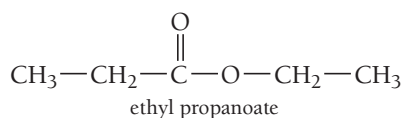
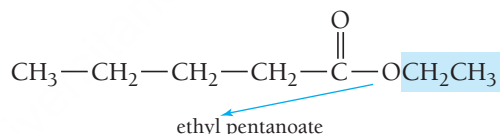
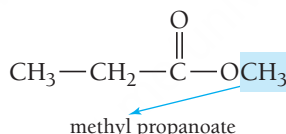
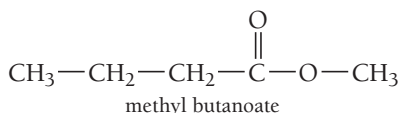
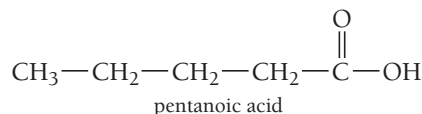
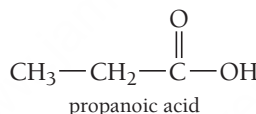
Figure 21.10 ◀ shows the structures of some common carboxylic acids and esters.

Naming Carboxylic Acids and Esters

We name carboxylic acids according to the number of carbon atoms in the longest chain containing the $-\text{COOH}$ functional group. We form the base name by dropping the $-e$ from the name of the corresponding alkane and adding the ending $-oic\ acid$:



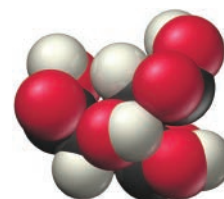
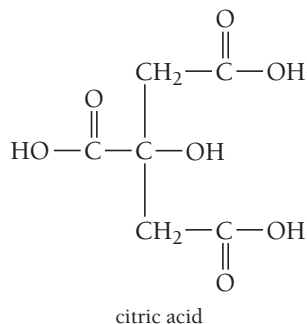
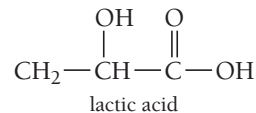
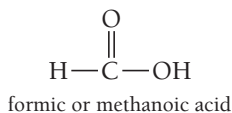
We name esters as if they were derived from a carboxylic acid by replacing the H on the OH with an alkyl group. The R group from the parent acid forms the base name of the compound. We change the $-ic$ on the name of the corresponding carboxylic acid to $-ate$, and drop $acid$, naming the R group that replaced the H on the carboxylic acid as an alkyl group with the ending $-yl$, as shown in the following examples:



▲ **FIGURE 21.10 Common Carboxylic Acids and Esters**

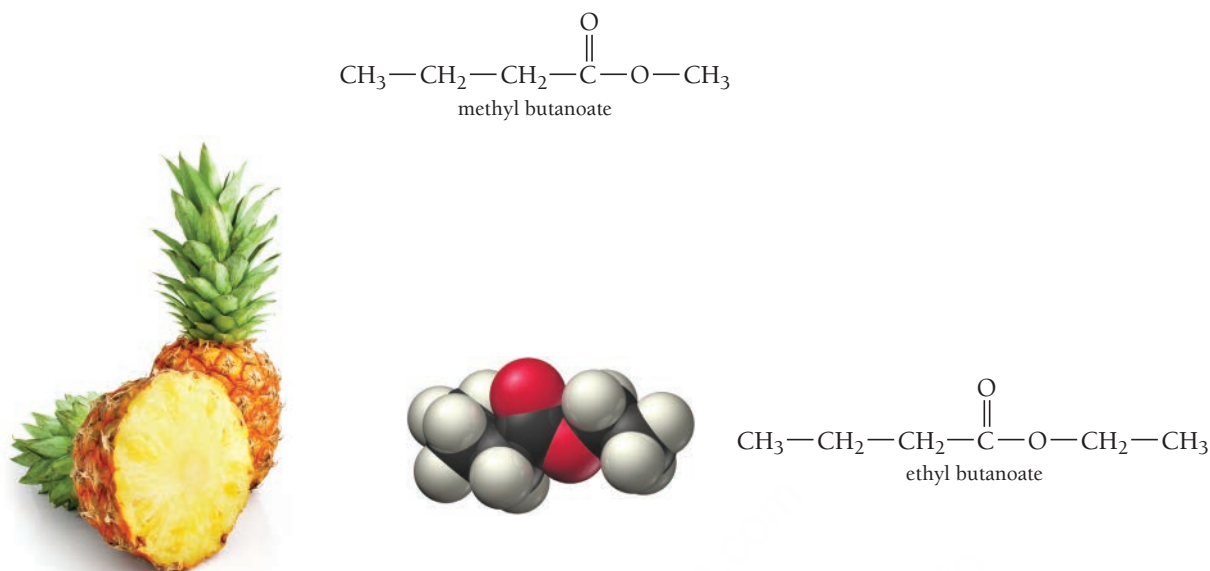
About Carboxylic Acids and Esters

Like all acids, carboxylic acids taste sour. The most familiar carboxylic acid is ethanoic acid, better known by its common name, acetic acid. Acetic acid is the component in vinegar that imparts its characteristic flavor and aroma. Acetic acid can form by the oxidation of ethanol, which is why wines left open to air become sour. Some yeasts and bacteria also form acetic acid when they metabolize sugars in bread dough. These are added to bread dough to make sourdough bread. Other common carboxylic acids include methanoic acid (formic acid), present in ant bites; lactic acid, which collects in muscles after intense exercise causing soreness; and citric acid, found in limes, lemons, and oranges (**Figure 21.11** ▼).



► **FIGURE 21.11 The Tart Taste of Limes** Citric acid is partly responsible for the sour taste of limes.


Esters are best known for their sweet smells. Methyl butanoate is largely responsible for the smell and taste of apples, and ethyl butanoate is largely responsible for the smell and taste of pineapples (see **Figure 21.12** ▼).



▲ **FIGURE 21.12 The Aroma of Pineapple** Ethyl butanoate is partly responsible for the aroma of pineapples.

Carboxylic Acid and Ester Reactions

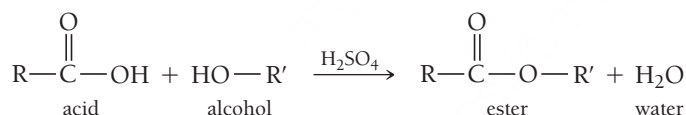
Carboxylic acids act as weak acids in solution:



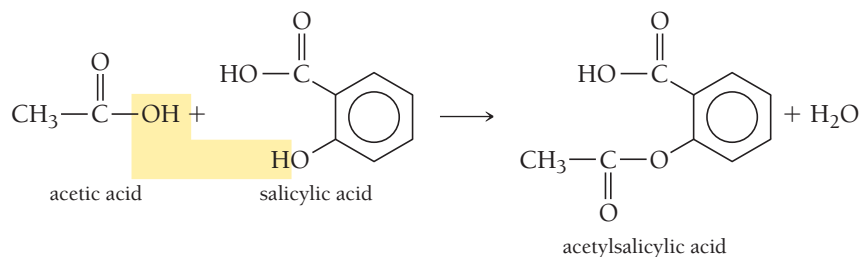
Like all acids, carboxylic acids react with strong bases via neutralization reactions. For example, propanoic acid reacts with sodium hydroxide to form sodium propanoate and water.



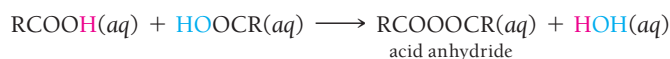
A carboxylic acid reacts with an alcohol to form an ester via a **condensation reaction**—a reaction in which two (or more) organic compounds join, often with the loss of water (or some other small molecule):




An important example of this reaction is the formation of acetylsalicylic acid (aspirin) from ethanoic acid (acetic acid) and salicylic acid (originally obtained from the bark of the willow tree):



If we subject a carboxylic acid to high temperatures, it undergoes a condensation reaction with itself to form an acid anhydride (*anhydride* means “without water”):



We can add water to an acid anhydride to reverse the reaction just shown and regenerate the carboxylic acid molecules.



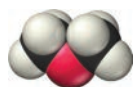
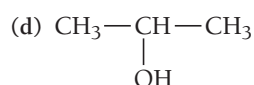
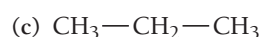
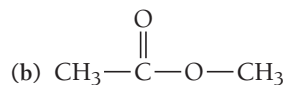
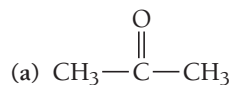
21.4

Cc

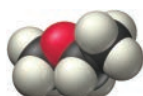
Conceptual
Connection

Oxidation

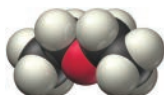
Arrange the compounds from least oxidized to most oxidized.



$\text{CH}_3-\text{O}-\text{CH}_3$
dimethyl ether



$\text{CH}_3-\text{O}-\text{CH}_2-\text{CH}_3$
ethyl methyl ether



$\text{CH}_3-\text{CH}_2-\text{O}-\text{CH}_2-\text{CH}_3$
diethyl ether

▲ **FIGURE 21.13 Ethers**

21.12 Ethers

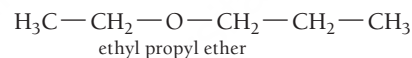
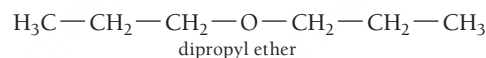
Ethers are organic compounds with the general formula ROR. The two R groups may be identical or they may be different. Some common ethers are shown in **Figure 21.13** ◀.

Naming Ethers

Common names for ethers have the format:

(R group 1) (R group 2) ether

If the two R groups differ, we use each of their names in alphabetical order. If the two R groups are the same, we use the prefix *di*-. Some examples include:



About Ethers

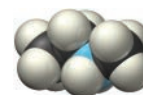
The most common ether is diethyl ether. Diethyl ether is a useful laboratory solvent because it can dissolve many organic compounds and it has a low boiling point (34.6°C). The low boiling point allows for easy removal of the solvent. Diethyl ether was used as a general anesthetic for many years. When inhaled, diethyl ether depresses the central nervous system, causing unconsciousness and insensitivity to pain. Its use as an anesthetic has decreased in recent years because other compounds have the same anesthetic effect with fewer side effects (such as nausea).

21.13 Amines

The simplest nitrogen-containing compound is ammonia (NH₃). **Amines** are organic compounds containing nitrogen that are derived from ammonia, with one or more of the hydrogen atoms replaced by alkyl groups. Like ammonia, amines are weak bases. We systematically name amines according to the hydrocarbon groups attached to the nitrogen and assign the ending *-amine*:

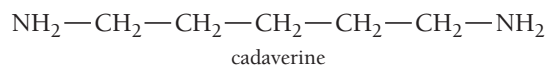
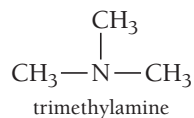


$\text{CH}_3-\text{CH}_2-\underset{\text{H}}{\underset{|}{\text{N}}}-\text{H}$
ethylamine



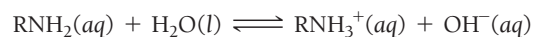
$\text{CH}_3-\text{CH}_2-\underset{\text{CH}_3}{\underset{|}{\text{N}}}-\text{H}$
ethylmethanamine

Amines are most commonly known for their awful odors. When a living organism dies, the bacteria that feast on its proteins emit amines. For example, trimethylamine causes the smell of rotten fish, and cadaverine causes the smell of decaying animal flesh:

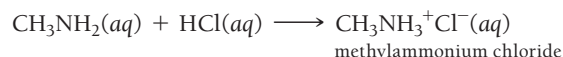


Amine Reactions

Just as carboxylic acids act as weak acids, so amines act as weak bases:



Like all bases, amines react with strong acids to form salts called ammonium salts. For example, methylamine reacts with hydrochloric acid to form methylammonium chloride:



A biochemically important amine reaction is the condensation reaction between a carboxylic acid and an amine.



This reaction is responsible for the formation of proteins from amino acids.

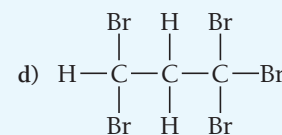
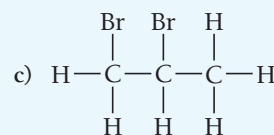
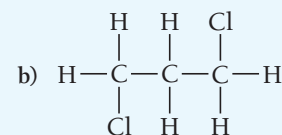
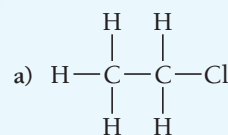
SELF-ASSESSMENT



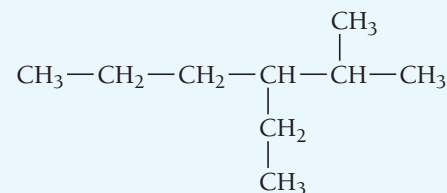
QUIZ

- Which property of carbon is related to its ability to form a large number of compounds?
 - tendency to form four covalent bonds
 - ability to form double and triple bonds
 - tendency to catenate
 - all of the above
- What is the correct formula for the alkane (noncyclic) containing eight carbon atoms?
 - C_8H_{16}
 - C_8H_{18}
 - C_8H_{14}
 - C_8H_8
- Which structure is not an isomer of $\text{CH}_3\text{CH}_2\text{CH}_2\text{CH}_2\text{CH}_3$?
 - $$\begin{array}{c} \text{CH}_3 \qquad \qquad \text{CH}_3 \\ | \qquad \qquad \qquad | \\ \text{CH}_2-\text{CH}_2-\text{CH}_2 \end{array}$$
 - $$\begin{array}{c} \text{CH}_3-\text{CH}-\text{CH}_2-\text{CH}_3 \\ | \\ \text{CH}_3 \end{array}$$
 - $$\begin{array}{c} \text{CH}_3 \\ | \\ \text{CH}_3-\text{C}-\text{CH}_3 \\ | \\ \text{CH}_3 \end{array}$$
 - None of the above (all are isomers).

- Which structure can exhibit optical isomerism?

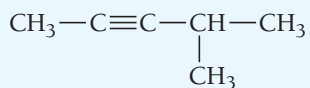


- Name the compound.



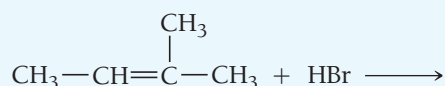
- 4-ethyl-5-methylhexane
- 3-ethyl-2-methylhexane
- 3-ethyl-2-methylnonane
- 4-methyl-5-ethylhexane

6. Name the compound.



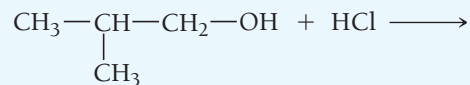
- a) 4-methyl-2-pentyne
b) 2-methyl-3-pentyne
c) 2-methyl-3-hexyne
d) 4-methyl-2-hexyne

7. Determine the major product of the reaction.



- a) $\text{CH}_2\text{Br}-\text{CH}=\underset{\text{CH}_3}{\text{C}}-\text{CH}_3$ b) $\text{CH}_3-\text{CH}_2-\underset{\text{CH}_3}{\text{CH}}-\text{CH}_3$
c) $\text{CH}_3-\underset{\text{Br}}{\text{CH}}-\underset{\text{CH}_3}{\text{CH}}-\text{CH}_3$ d) $\text{CH}_3-\text{CH}_2-\underset{\text{Br}}{\text{C}}-\text{CH}_3$

8. Determine the product of the reaction.



- a) $\text{CH}_3-\underset{\text{Cl}}{\text{CH}}-\text{CH}_3$ b) $\text{CH}_3-\underset{\text{CH}_3}{\text{CH}}-\text{CH}_3$
c) $\text{CH}_3-\underset{\text{CH}_3}{\underset{\text{Cl}}{\text{C}}}-\text{CH}_2-\text{OH}$ d) $\text{CH}_3-\underset{\text{CH}_3}{\text{CH}}-\text{CH}_2-\text{Cl}$

9. Which compound is an ester?

- a) $\text{CH}_3-\text{CH}_2-\text{O}-\text{CH}_3$ b) $\text{CH}_3-\text{CH}_2-\overset{\text{O}}{\parallel}{\text{C}}-\text{OH}$
c) $\text{CH}_3-\overset{\text{O}}{\parallel}{\text{C}}-\text{CH}_3$ d) $\text{CH}_3-\overset{\text{O}}{\parallel}{\text{C}}-\text{O}-\text{CH}_2\text{CH}_3$

10. Which compound is most likely to have a foul odor?

- a) $\text{CH}_3-\overset{\text{O}}{\parallel}{\text{C}}-\text{O}-\text{CH}_3$ b) $\text{CH}_3-\text{CH}_2-\text{NH}_2$
c) $\text{CH}_3-\text{CH}_2-\text{O}-\text{CH}_3$ d) $\text{CH}_3-\text{CH}_2-\text{CH}_2-\text{OH}$

Answers: 1. d; 2. b; 3. a; 4. c; 5. b; 6. a; 7. d; 8. d; 9. d; 10. b

CHAPTER SUMMARY 21

REVIEW

MasteringChemistry™ provides end-of-chapter exercises, feedback-enriched tutorial problems, animations, and interactive activities to encourage problem solving practice and deeper understanding of key concepts and topics.

KEY LEARNING OUTCOMES

CHAPTER OBJECTIVES	ASSESSMENT
Write Structural Formulas for Hydrocarbons (21.3)	• Example 21.1 For Practice 21.1 Exercises 37, 38
Name Alkanes (21.4)	• Examples 21.2, 21.3, 21.4 For Practice 21.2, 21.3, 21.4 Exercises 43, 44
Name Alkenes and Alkynes (21.5)	• Example 21.5 For Practice 21.5 Exercises 53–56
Write Addition Reactions (21.6)	• Example 21.6 For Practice 21.6 Exercises 59–62
Write Reactions for Alcohols (21.9)	• Example 21.7 For Practice 21.7 Exercises 75, 76

KEY TERMS

Section 21.1

organic molecule (936)
organic chemistry (936)

Section 21.3

alkane (937)
alkene (937)

alkyne (937)
aromatic hydrocarbon (937)
aliphatic hydrocarbon (937)
structural isomers (938)
structural formula (938)
stereoisomers (941)
optical isomers (941)

enantiomers (optical isomers) (942)
chiral (942)
dextrorotatory (942)
levorotatory (942)
racemic mixture (942)

Section 21.4

saturated hydrocarbon (944)

Section 21.5

unsaturated hydrocarbon (948)
geometric (cis–trans) isomerism (953)

Section 21.6

substitution reaction (954)
addition reaction (954)

Section 21.7

phenyl group (958)

Section 21.8

functional group (960)

Section 21.9

alcohol (961)
hydroxyl group (961)
elimination reaction (962)

Section 21.10

aldehyde (963)
ketone (963)
carbonyl group (963)

Section 21.11

carboxylic acid (966)
esters (966)
condensation reaction (967)

Section 21.12

ether (968)

Section 21.13

amine (968)

KEY CONCEPTS

Fragrances and Odors (21.1)

- Organic chemistry is the study of organic compounds, which contain carbon (and other elements including hydrogen, oxygen, and nitrogen).

Carbon (21.2)

- Carbon forms more compounds than all the other elements combined.
- Carbon's four valence electrons (in conjunction with its size) allow carbon to form four bonds (in the form of single, double, or triple bonds).
- Carbon also has the capacity to catenate (to form long chains) because of the strength of the carbon–carbon bond.

Hydrocarbons (21.3)

- Organic compounds containing only carbon and hydrogen are called hydrocarbons, the key components of fuels.
- Hydrocarbons are divided into four different types: alkanes, alkenes, alkynes, and aromatic hydrocarbons.
- Stereoisomers are molecules that feature the same atoms bonded in the same order but arranged differently in space. Optical isomerism, a type of stereoisomerism, occurs when two molecules are nonsuperimposable mirror images of one another.

Alkanes (21.4)

- Alkanes are saturated hydrocarbons—they contain only single bonds and are therefore represented by the generic formula C_nH_{2n+2} . Alkane names always end in *-ane*.

Alkenes and Alkynes (21.5)

- Alkenes and alkynes are unsaturated hydrocarbons—they contain double bonds (alkenes) or triple bonds (alkynes) and are represented by the generic formulas C_nH_{2n} and C_nH_{2n-2} , respectively.
- Alkene names end in *-ene* and alkynes end in *-yne*.
- Because rotation about a double bond is severely restricted, geometric (or *cis–trans*) isomerism occurs in alkenes.

Hydrocarbon Reactions (21.6)

- The most common hydrocarbon reaction is probably combustion, in which hydrocarbons react with oxygen to form carbon dioxide and water; this reaction is exothermic and is used to provide most of our society's energy.
- Alkanes can also undergo substitution reactions, where heat or light causes another atom, commonly a halogen such as bromine, to be substituted for a hydrogen atom.

- Unsaturated hydrocarbons undergo addition reactions. If the addition reaction is between two unsymmetrical molecules, Markovnikov's rule predicts that the positive end of the polar reagent adds to the carbon with the most hydrogen atoms.

Aromatic Hydrocarbons (21.7)

- Aromatic hydrocarbons contain six-membered benzene rings represented with alternating single and double bonds that become equivalent through resonance. These compounds are called aromatic because they often produce pleasant fragrances.
- Because of the stability of the aromatic ring, benzene is more stable than a straight-chain alkene, and it undergoes substitution rather than addition reactions.

Functional Groups (21.8)

- Characteristic groups of atoms, such as hydroxyl ($-\text{OH}$), are called functional groups. Molecules that contain the same functional group have similar chemical and physical properties, and they are referred to as families.

Alcohols (21.9)

- The family of alcohols contains the $-\text{OH}$ group and is named with the suffix *-ol*.
- Alcohols are commonly used in gasoline, in alcoholic beverages, and in sterilization procedures.
- Alcohols undergo substitution reactions, in which a substituent such as a halogen replaces the hydroxyl group.
- Alcohols undergo elimination reactions, in which water is eliminated across a bond to form an alkene, and oxidation or reduction reactions.
- Alcohols also react with active metals to form alkoxide ions and hydrogen gas.

Aldehydes and Ketones (21.10)

- Aldehydes and ketones both contain a carbonyl group (a carbon atom double-bonded to oxygen).
- In aldehydes, the carbonyl group is at the end of a carbon chain, while in ketones it is between two other carbon atoms.
- Aldehydes are named with the suffix *-al* and ketones with the suffix *-one*.
- A carbonyl can be formed by the oxidation of an alcohol or reverted to an alcohol by reduction.
- Like alkenes, carbonyls undergo addition reactions; however, because the carbon–oxygen bond is highly polar, the electronegative component of the reagent always adds to the carbon atom, and the less electronegative part adds to the oxygen.

Carboxylic Acids and Esters (21.11)

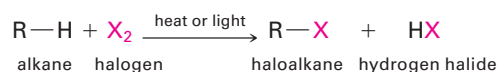
- Carboxylic acids contain a carbonyl group and a hydroxide on the same carbon and are named with the suffix *-oic acid*.
- Esters contain a carbonyl group bonded to an oxygen atom that is in turn bonded to an R group; they are named with the suffix *-oate*.
- Carboxylic acids taste sour, such as acetic acid in vinegar, while esters smell sweet.
- Carboxylic acids react as weak acids but can also form esters through condensation reactions with alcohols.

Ethers (21.12)

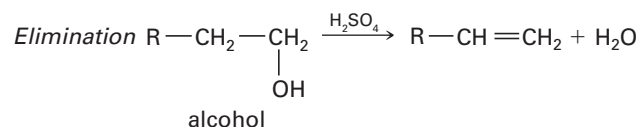
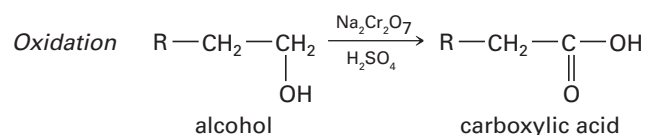
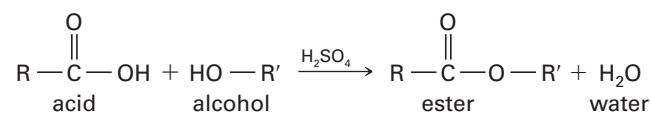
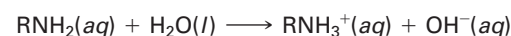
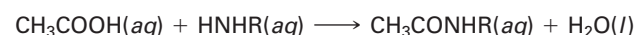
- The family of ethers contains an oxygen atom between two R groups.
- Ethers are named with the ending *-yl ether*.

Amines (21.13)

- Amines are organic compounds that contain nitrogen and are named with the suffix *-amine*.
- They are known for their terrible odors; the smell of decaying animal flesh is produced by cadaverine.
- Amines act as weak bases and produce a salt when mixed with a strong acid.
- The combination of an amine with a carboxylic acid leads to a condensation reaction; this reaction is used by our bodies to produce proteins from amino acids.

KEY EQUATIONS AND RELATIONSHIPS**Halogen Substitution Reactions in Alkanes (21.6)****Common Functional Groups (21.8)**

Family	General Formula	Condensed General Formula	Example	Name
Alcohols	R—OH	ROH	CH ₃ CH ₂ OH	ethanol (ethyl alcohol)
Ethers	R—O—R	ROR	CH ₃ OCH ₃	dimethyl ether
Aldehydes	$\text{R}-\overset{\text{O}}{\parallel}{\text{C}}-\text{H}$	RCHO	$\text{H}_3\text{C}-\overset{\text{O}}{\parallel}{\text{C}}-\text{H}$	ethanal (acetaldehyde)
Ketones	$\text{R}-\overset{\text{O}}{\parallel}{\text{C}}-\text{R}$	RCOR	$\text{H}_3\text{C}-\overset{\text{O}}{\parallel}{\text{C}}-\text{CH}_3$	propanone (acetone)
Carboxylic acids	$\text{R}-\overset{\text{O}}{\parallel}{\text{C}}-\text{OH}$	RCOOH	$\text{H}_3\text{C}-\overset{\text{O}}{\parallel}{\text{C}}-\text{OH}$	acetic acid
Esters	$\text{R}-\overset{\text{O}}{\parallel}{\text{C}}-\text{OR}$	RCOOR	$\text{H}_3\text{C}-\overset{\text{O}}{\parallel}{\text{C}}-\text{OCH}_3$	methyl acetate
Amines	$\text{R}-\overset{\text{R}}{\underset{\text{R}}{\text{N}}}-\text{R}$	R ₃ N	$\text{H}_3\text{CH}_2\text{C}-\overset{\text{H}}{\underset{\text{H}}{\text{N}}}-\text{H}$	ethylamine

Alcohol Reactions (21.9)**Carboxylic Acid Condensation Reactions (21.11)****Amine Acid-Base Reactions (21.13)****Amine-Carboxylic Acid Condensation Reactions (21.13)****EXERCISES****REVIEW QUESTIONS**

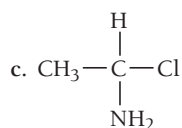
- What kinds of molecules often trigger our sense of smell?
- What is organic chemistry?
- What is unique about carbon and carbon-based compounds? Why did life evolve around carbon?
- Why does carbon form such a large diversity of compounds?
- Why does silicon exhibit less diversity of compounds than carbon does?
- Describe the geometry and hybridization about a carbon atom that forms the following:
 - four single bonds.
 - two single bonds and one double bond.
 - one single bond and one triple bond.
- What are hydrocarbons? What are their main uses?
- What are the main classifications of hydrocarbons? What are their generic molecular formulas?
- Explain the differences between a structural formula, a condensed structural formula, a carbon skeleton formula, a ball-and-stick model, and a space-filling model.
- What are structural isomers? How do the properties of structural isomers differ from one another?
- What are optical isomers? How do the properties of optical isomers differ from one another?
- Define each term related to optical isomerism: enantiomers, chiral, dextrorotatory, levorotatory, racemic mixture.
- What is the difference between saturated and unsaturated hydrocarbons?
- What are the key differences in the way that alkanes, alkenes, and alkynes are named?
- Explain geometric isomerism in alkenes. How do the properties of geometric isomers differ from one another?
- Describe and provide an example of a hydrocarbon combustion reaction.
- What kinds of reactions are common to alkanes? List an example of each.
- Describe each kind of reaction.
 - substitution reaction
 - addition reaction
 - elimination reaction
- What kinds of reactions are common to alkenes? List an example of each.
- Explain Markovnikov's rule and give an example of a reaction to which it applies.
- What is the structure of benzene? What are the different ways in which this structure is represented?
- What kinds of reactions are common to aromatic compounds? Provide an example of each.
- What is a functional group? List some examples.
- What is the generic structure of alcohols? Write the structures of two specific alcohols.
- Explain oxidation and reduction with respect to organic compounds.
- Which kinds of reactions are common to alcohols? Provide an example of each.
- What are the generic structures for aldehydes and ketones? Write a structure for a specific aldehyde and ketone.
- Which kinds of reactions are common to aldehydes and ketones? List an example of each.
- What are the generic structures for carboxylic acids and esters? Write a structure for a specific carboxylic acid and ester.
- Which kinds of reactions are common to carboxylic acids and esters? Provide an example of each.
- What is the generic structure of ethers? Write the structures of two specific ethers.
- What is the generic structure of amines? Write the structures of two specific amines.

PROBLEMS BY TOPIC

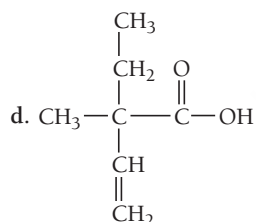
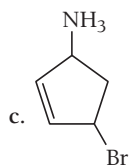
Note: Answers to all odd-numbered Problems, numbered in blue, can be found in Appendix III. Exercises in the Problems by Topic section are paired, with each odd-numbered problem followed by a similar even-numbered problem. Exercises in the Cumulative Problems section are also paired but more loosely. Because of their nature, Challenge Problems and Conceptual Problems are unpaired.

Hydrocarbons

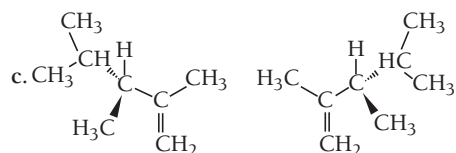
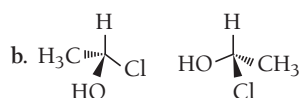
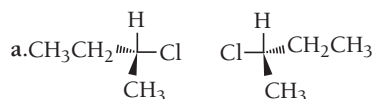
33. Based on the molecular formula, determine whether each compound is an alkane, alkene, or alkyne. (Assume that the hydrocarbons are noncyclic and there is no more than one multiple bond.)
 a. C_5H_{12} b. C_3H_6 c. C_7H_{12} d. $C_{11}H_{22}$
34. Based on the molecular formula, determine whether each compound is an alkane, alkene, or alkyne. (Assume that the hydrocarbons are noncyclic and there is no more than one multiple bond.)
 a. C_8H_{16} b. C_4H_6 c. C_7H_{16} d. C_2H_2
35. Write structural formulas for each of the nine structural isomers of heptane.
36. Write structural formulas for any 6 of the 18 structural isomers of octane.
37. Determine whether each compound exhibits optical isomerism.
 a. CCl_4
 b. $CH_3-CH_2-\underset{\text{CH}_3}{\underset{|}{CH}}-CH_2-CH_2-CH_2-CH_3$



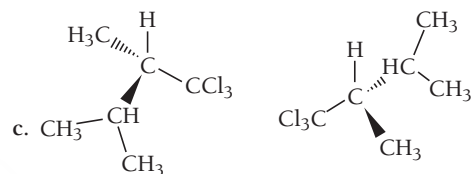
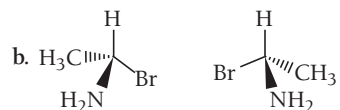
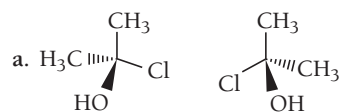
38. Determine whether each compound exhibits optical isomerism.
 a. $CH_3CH_2CHClCH_3$ b. $CH_3CCl_2CH_3$



39. Determine whether the molecules in each pair are the same or enantiomers.

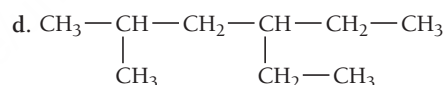
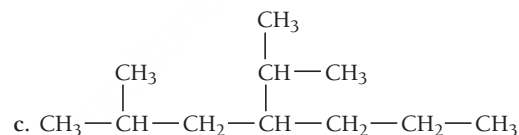
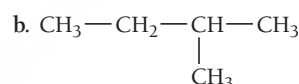
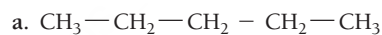


40. Determine whether the molecules in each pair are the same or enantiomers.

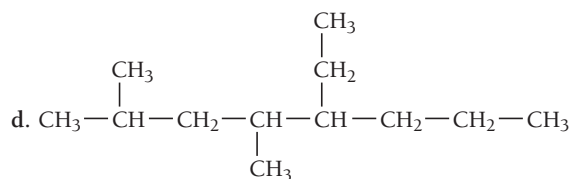
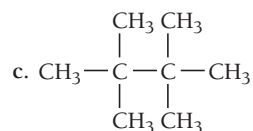
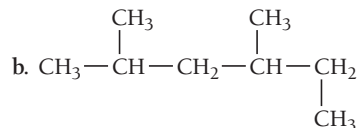
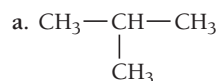


Alkanes

41. Name each alkane.



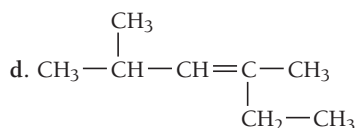
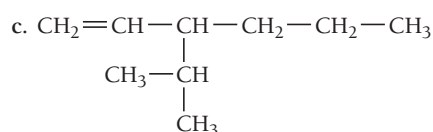
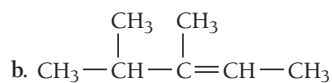
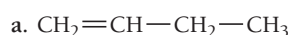
42. Name each alkane



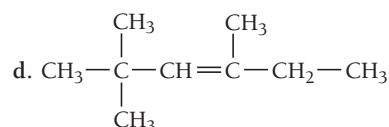
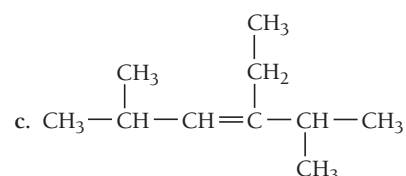
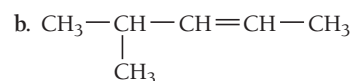
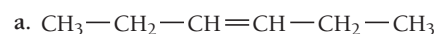
43. Draw a structure for each alkane.
- 3-ethylhexane
 - 3-ethyl-3-methylpentane
 - 2,3-dimethylbutane
 - 4,7-diethyl-2,2-dimethylnonane
44. Draw a structure for each alkane.
- 2,2-dimethylpentane
 - 3-isopropylheptane
 - 4-ethyl-2,2-dimethylhexane
 - 4,4-diethyloctane
45. Complete and balance each hydrocarbon combustion reaction.
- $\text{CH}_3\text{CH}_2\text{CH}_3 + \text{O}_2 \longrightarrow$
 - $\text{CH}_3\text{CH}_2\text{CH}=\text{CH}_2 + \text{O}_2 \longrightarrow$
 - $\text{CH}\equiv\text{CH} + \text{O}_2 \longrightarrow$
46. Complete and balance each hydrocarbon combustion reaction.
- $\text{CH}_3\text{CH}_2\text{CH}_2\text{CH}_3 + \text{O}_2 \longrightarrow$
 - $\text{CH}_2=\text{CHCH}_3 + \text{O}_2 \longrightarrow$
 - $\text{CH}\equiv\text{CCH}_2\text{CH}_3 + \text{O}_2 \longrightarrow$
47. List all the possible products for each alkane substitution reaction. (Assume monosubstitution.)
- $\text{CH}_3\text{CH}_3 + \text{Br}_2 \longrightarrow$
 - $\text{CH}_3\text{CH}_2\text{CH}_3 + \text{Cl}_2 \longrightarrow$
 - $\text{CH}_2\text{Cl}_2 + \text{Br}_2 \longrightarrow$
 - $\text{CH}_3-\underset{\text{CH}_3}{\text{CH}}-\text{CH}_3 + \text{Cl}_2 \longrightarrow$
48. List all the possible products for each alkane substitution reaction. (Assume monosubstitution.)
- $\text{CH}_4 + \text{Cl}_2 \longrightarrow$
 - $\text{CH}_3\text{CH}_2\text{Br} + \text{Br}_2 \longrightarrow$
 - $\text{CH}_3\text{CH}_2\text{CH}_2\text{CH}_3 + \text{Cl}_2 \longrightarrow$
 - $\text{CH}_3\text{CHBr}_2 + \text{Br}_2 \longrightarrow$

Alkenes and Alkynes

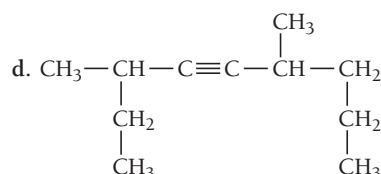
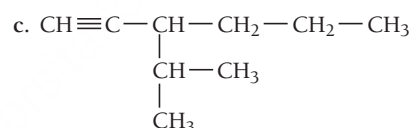
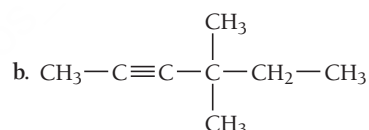
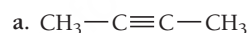
49. Write structural formulas for each of the possible isomers of *n*-hexene that are formed by moving the position of the double bond.
50. Write structural formulas for each of the possible isomers of *n*-pentyne that are formed by moving the position of the triple bond.
51. Name each alkene.



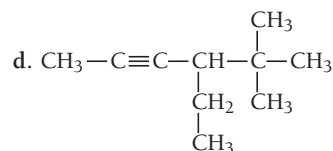
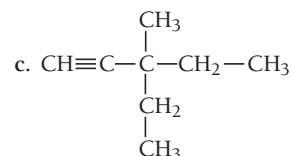
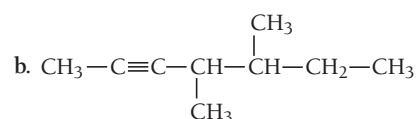
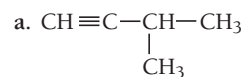
52. Name each alkene.



53. Name each alkyne.



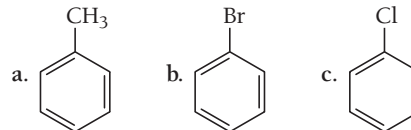
54. Name each alkyne.



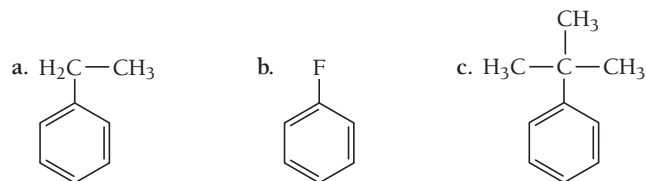
55. Draw the correct structure for each compound.
- 4-octyne
 - 3-nonene
 - 3,3-dimethyl-1-pentyne
 - 5-ethyl-3,6-dimethyl-2-heptene
56. Draw the correct structure for each compound.
- 2-hexene
 - 1-heptyne
 - 4,4-dimethyl-2-hexene
 - 3-ethyl-4-methyl-2-pentene
57. List the products of each alkene addition reaction.
- $\text{CH}_3-\text{CH}=\text{CH}-\text{CH}_3 + \text{Cl}_2 \longrightarrow$
 - $\text{CH}_3-\underset{\text{CH}_3}{\text{CH}}-\text{CH}=\text{CH}-\text{CH}_3 + \text{HBr} \longrightarrow$
 - $\text{CH}_3-\text{CH}_2-\text{CH}=\text{CH}-\text{CH}_3 + \text{Br}_2 \longrightarrow$
 - $\text{CH}_3-\underset{\text{CH}_3}{\text{CH}}-\text{CH}=\underset{\text{CH}_3}{\text{C}}-\text{CH}_3 + \text{HCl} \longrightarrow$
58. What are the products of each alkene addition reaction?
- $\text{CH}_3-\underset{\text{CH}_3}{\text{CH}}-\text{CH}=\text{CH}_2 + \text{Br}_2 \longrightarrow$
 - $\text{CH}_2=\text{CH}-\text{CH}_3 + \text{Cl}_2 \longrightarrow$
 - $\text{CH}_3-\underset{\text{CH}_3}{\underset{\text{CH}_3}{\text{C}}}-\text{CH}=\text{CH}_2 + \text{HCl} \longrightarrow$
 - $\text{CH}_3-\underset{\text{CH}_2-\text{CH}_3}{\text{CH}}-\text{CH}=\underset{\text{CH}_3}{\text{C}}-\text{CH}_3 + \text{HBr} \longrightarrow$
59. Complete each hydrogenation reaction.
- $\text{CH}_2=\text{CH}-\text{CH}_3 + \text{H}_2 \xrightarrow{\text{catalyst}}$
 - $\text{CH}_3-\underset{\text{CH}_3}{\text{CH}}-\text{CH}=\text{CH}_2 + \text{H}_2 \xrightarrow{\text{catalyst}}$
 - $\text{CH}_3-\underset{\text{CH}_3}{\text{CH}}-\underset{\text{CH}_3}{\text{C}}=\text{CH}_2 + \text{H}_2 \xrightarrow{\text{catalyst}}$
60. Complete each hydrogenation reaction.
- $\text{CH}_3-\text{CH}_2-\text{CH}=\text{CH}_2 + \text{H}_2 \xrightarrow{\text{catalyst}}$
 - $\text{CH}_3-\text{CH}_2-\underset{\text{CH}_3}{\text{C}}=\underset{\text{CH}_3}{\text{C}}-\text{CH}_3 + \text{H}_2 \xrightarrow{\text{catalyst}}$
 - $\text{CH}_3-\text{CH}_2-\underset{\text{CH}_3}{\text{C}}=\text{CH}_2 + \text{H}_2 \xrightarrow{\text{catalyst}}$

Aromatic Hydrocarbons

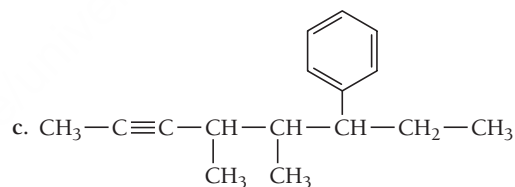
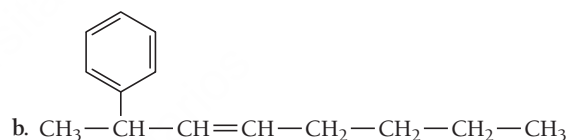
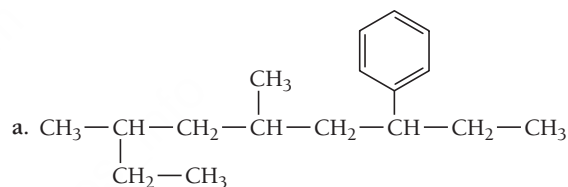
61. Name each monosubstituted benzene.



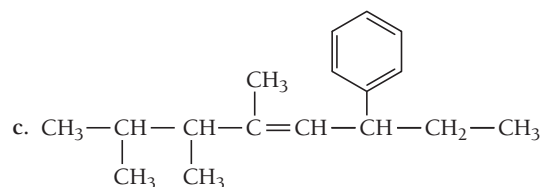
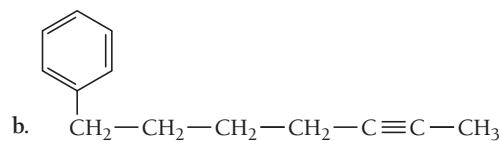
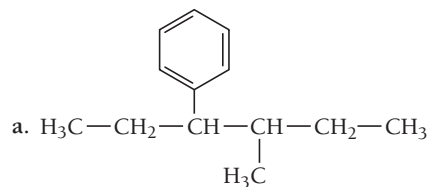
62. Name each monosubstituted benzene.



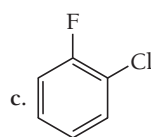
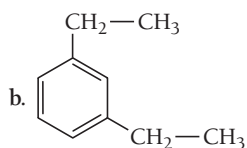
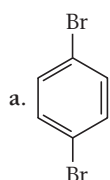
63. Name each compound in which the benzene ring is best treated as a substituent.



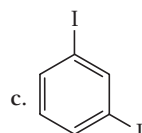
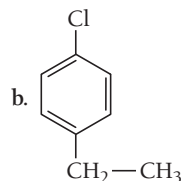
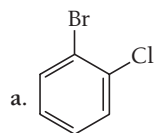
64. Name each compound in which the benzene ring is best treated as a substituent.



65. Name each disubstituted benzene.



66. Name each disubstituted benzene.



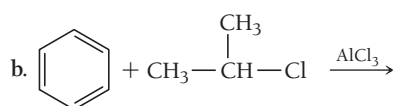
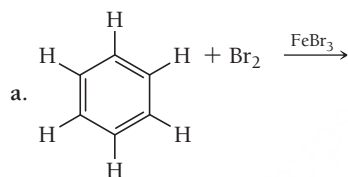
67. Draw the structure for each compound.

- isopropylbenzene
- meta*-dibromobenzene
- 1-chloro-4-methylbenzene

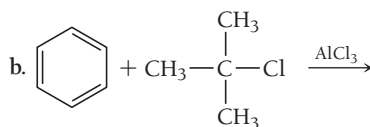
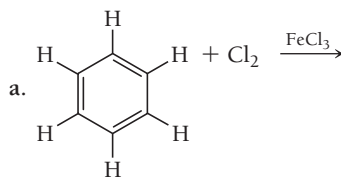
68. Draw the structure for each compound.

- ethylbenzene
- 1-iodo-2-methylbenzene
- para*-diethylbenzene

69. What are the products of each aromatic substitution reaction?

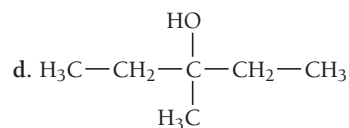
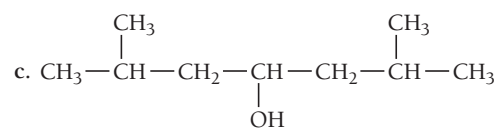
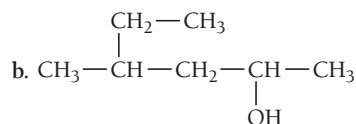
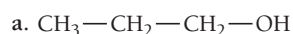


70. What are the products of each aromatic substitution reaction?



Alcohols

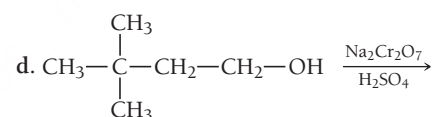
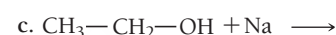
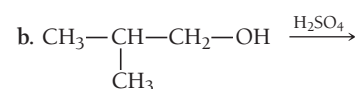
71. Name each alcohol.



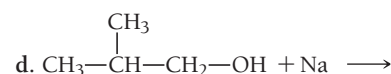
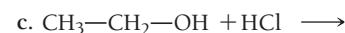
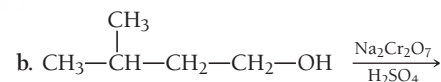
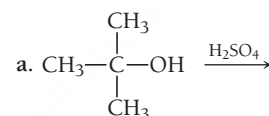
72. Draw the structure for each alcohol.

- 2-butanol
- 2-methyl-1-propanol
- 3-ethyl-1-hexanol
- 2-methyl-3-pentanol

73. List the products of each alcohol reaction.

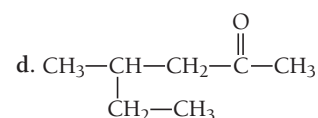
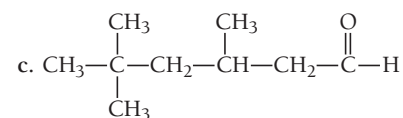
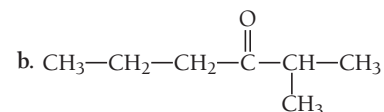
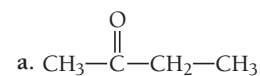


74. List the products of each alcohol reaction.



Aldehydes and Ketones

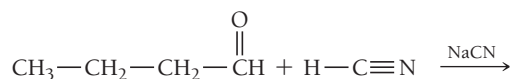
75. Name each aldehyde or ketone.



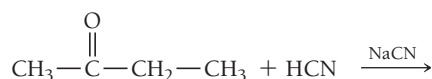
76. Draw the structure of each aldehyde or ketone.

- hexanal
- 2-pentanone
- 2-methylbutanal
- 4-heptanone

77. Determine the product of the addition reaction.

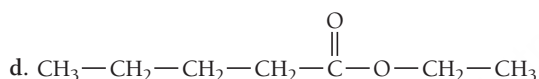
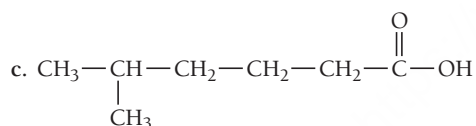
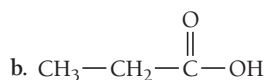
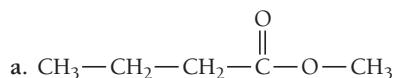


78. Determine the product of the addition reaction.



Carboxylic Acids and Esters

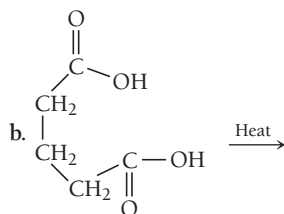
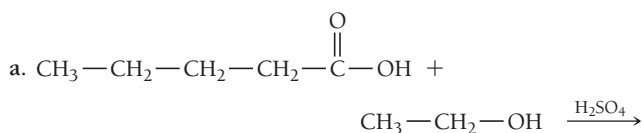
79. Name each carboxylic acid or ester.



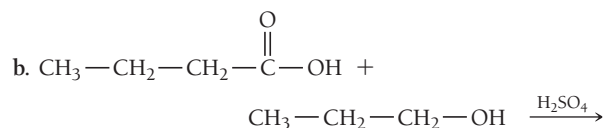
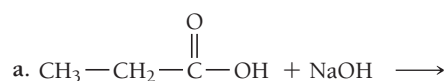
80. Draw the structure of each carboxylic acid or ester.

- pentanoic acid
- methyl hexanoate
- 3-ethylheptanoic acid
- butyl ethanoate

81. Determine the products of each carboxylic acid reaction.



82. Determine the products of each carboxylic acid reaction.



Ethers

83. Name each ether.

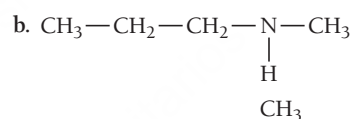
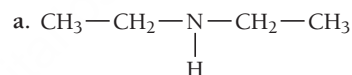
- $\text{CH}_3-\text{CH}_2-\text{CH}_2-\text{O}-\text{CH}_2-\text{CH}_3$
- $\text{CH}_3-\text{CH}_2-\text{CH}_2-\text{CH}_2-\text{CH}_2-\text{O}-\text{CH}_2-\text{CH}_3$
- $\text{CH}_3-\text{CH}_2-\text{CH}_2-\text{O}-\text{CH}_2-\text{CH}_2-\text{CH}_3$
- $\text{CH}_3-\text{CH}_2-\text{O}-\text{CH}_2-\text{CH}_2-\text{CH}_2-\text{CH}_3$

84. Draw the structure for each ether.

- ethyl propyl ether
- dibutyl ether
- methyl hexyl ether
- dipentyl ether

Amines

85. Name each amine.



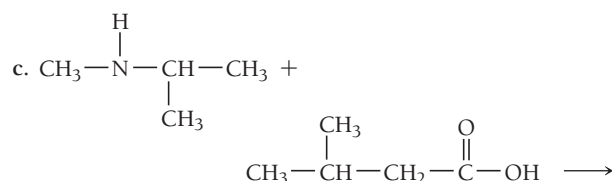
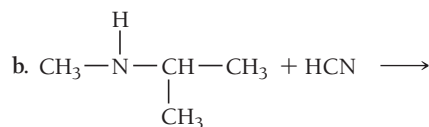
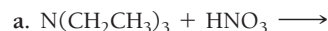
86. Draw the structure for each amine.

- isopropylamine
- triethylamine
- butylethylamine

87. Classify each amine reaction as acid–base or condensation and list its products.

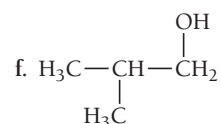
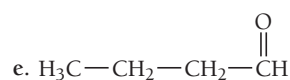
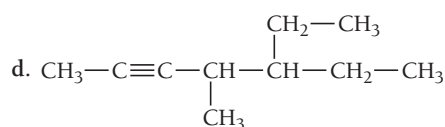
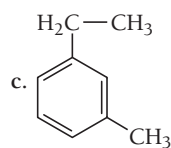
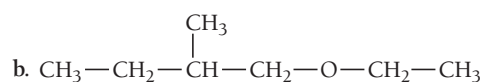
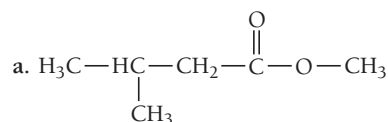
- $\text{CH}_3\text{NHCH}_3 + \text{HCl} \longrightarrow$
- $\text{CH}_3\text{CH}_2\text{NH}_2 + \text{CH}_3\text{CH}_2\text{COOH} \longrightarrow$
- $\text{CH}_3\text{NH}_2 + \text{H}_2\text{SO}_4 \longrightarrow$

88. List the products of each amine reaction.

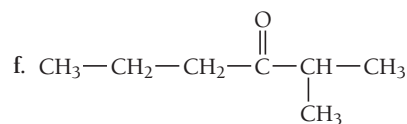
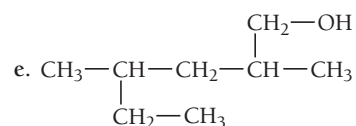
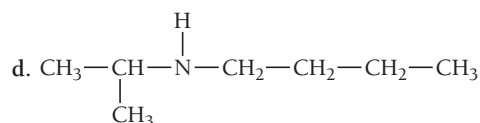
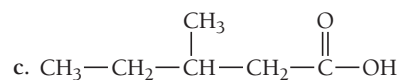
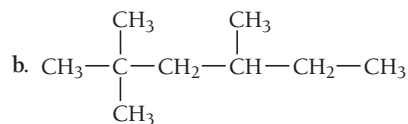
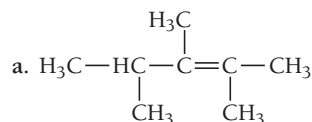


CUMULATIVE PROBLEMS

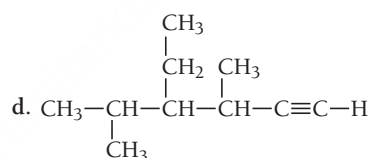
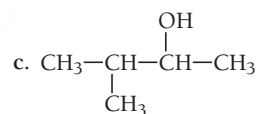
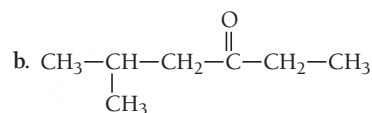
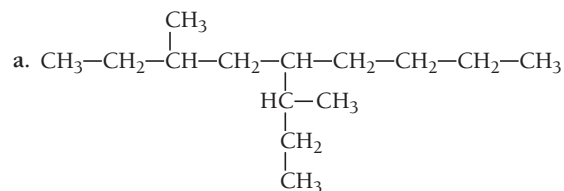
89. Identify each organic compound as an alkane, alkene, alkyne, aromatic hydrocarbon, alcohol, ether, aldehyde, ketone, carboxylic acid, ester, or amine, and provide a name for the compound.



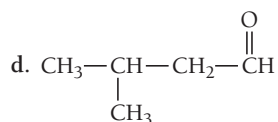
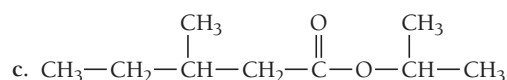
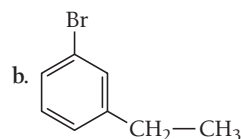
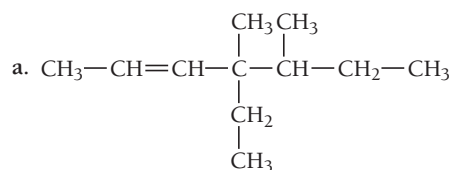
90. Identify each organic compound as an alkane, alkene, alkyne, aromatic hydrocarbon, alcohol, ether, aldehyde, ketone, carboxylic acid, ester, or amine, and provide a name for the compound.



91. Name each compound.

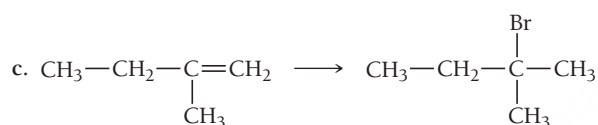
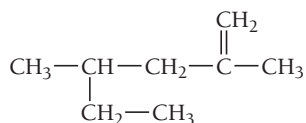
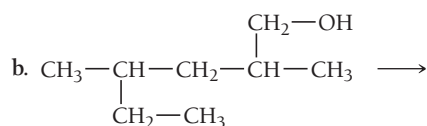
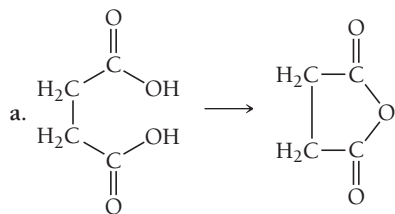


92. Name each compound.

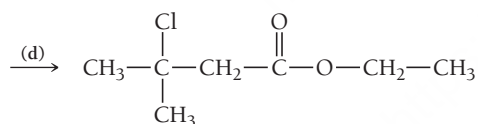
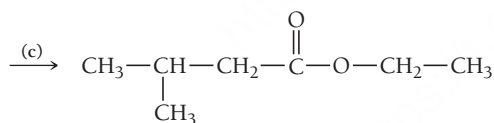
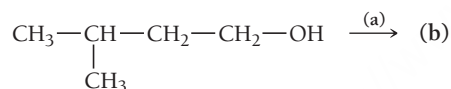


CHALLENGE PROBLEMS

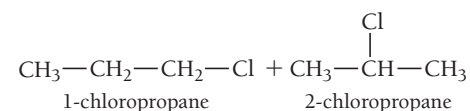
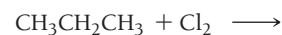
105. Determine the one or two steps it takes to get from the starting material to the product using reactions found in this chapter.



106. Given the following synthesis of ethyl 3-chloro-3-methylbutanoate, fill in the missing intermediates or reactants.



107. For the chlorination of propane, the two isomers shown here are possible.

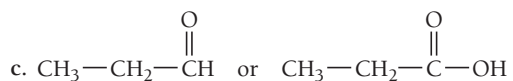
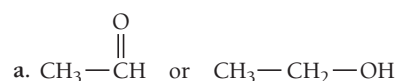


Propane has six hydrogen atoms on terminal carbon atoms—called primary (1°) hydrogen atoms—and two hydrogen atoms on the interior carbon atom—called secondary (2°) hydrogen atoms.

- If the two different types of hydrogen atoms were equally reactive, what ratio of 1-chloropropane to 2-chloropropane would we expect as monochlorination products?
 - The result of a reaction yields 55% 2-chloropropane and 45% 1-chloropropane. What can we conclude about the relative reactivity of the two different kinds of hydrogen atoms? Determine a ratio of the reactivity of one type of hydrogen atom to the other.
108. There are two isomers of C_4H_{10} . Suppose that each isomer is treated with Cl_2 and the products that have the composition $\text{C}_4\text{H}_8\text{Cl}_2$ are isolated. Find the number of different products that form from each of the original C_4H_{10} compounds. Do not consider optical isomerism.
109. Identify the compounds formed in the previous problem that are chiral.
110. Nitromethane has the formula CH_3NO_2 , with the N bonded to the C and without O—O bonds. Draw its two most important contributing structures.
- What is the hybridization of the C, and how many hybrid orbitals are in the molecule?
 - What is the shortest bond?
 - Between which two atoms is the strongest bond found?
 - Predict whether the HCH bond angles are greater or less than 109.5° and justify your prediction.
111. Free radical fluorination of methane is uncontrollably violent, and free radical iodination of methane is a very poor reaction. Explain these observations in light of bond energies.
112. There are two compounds with the formula C_3H_6 , one of which does not have a multiple bond. Draw its structure and explain why it is much less stable than the isomer with the double bond.
113. Consider molecules that have two carbons and two chlorines. Draw the structures of three of these with no dipole moment and two with a dipole moment.

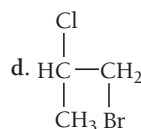
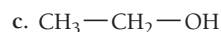
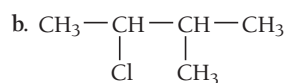
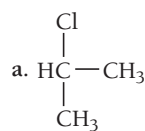
CONCEPTUAL PROBLEMS

114. Pick the more oxidized structure from each pair.



115. Draw the structure and name a compound with the formula C_8H_{18} that forms only one product with the formula $\text{C}_8\text{H}_{17}\text{Br}$ when it is treated with Br_2 .

116. Determine whether each structure is chiral.



QUESTIONS FOR GROUP WORK

Active Classroom Learning

Discuss these questions with the group and record your consensus answer.

117. Have each group member select a different functional group. Individually, draw and name a compound containing your functional group. Pass your drawing to the group member on your right and your compound name to the group member on your left. Name the compound for the drawing you received and draw the compound whose name you received.

118. Using complete sentences, compare and contrast each of the following, mentioning at least two similarities and two differences for each:

- salt and sugar
- methane and 3-methylheptane
- aldehydes and ketones

119. The octane rating for gasoline is a measurement of how readily a fuel combusts compared to 2,2,4-trimethylpentane, an isomer of octane.

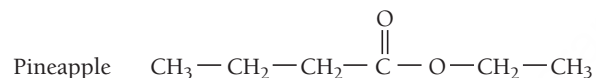
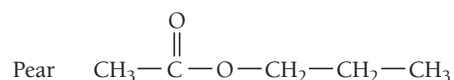
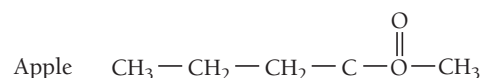
- Draw 2,2,4-trimethylpentane and verify that it is an isomer of octane.
- Draw four other isomers of octane.
- Select one of the isomers and draw it such that it looks different on the page but is still the exact same compound.
- Name this isomer.
- Define isomer using a complete sentence.

120. Working individually, have each group member select from the chapter a reaction characteristic of a particular organic functional group. Individually, write out your reaction with one of the following left as a blank: one reactant, one product, or reaction conditions. Pass your reaction to the group member on your right. Fill in the blank of the reaction you have received.

DATA INTERPRETATION AND ANALYSIS

121. Ester compounds often have a sweet, pleasant odor. Many characteristic fruit scents are largely due to the natural presence of one or more ester compounds. As such, artificial scents for foods are often composed of complex mixtures of various esters. The exact identity and ratio of ingredients that compose a particular scent are closely guarded secrets in the food and fragrance industry.

Suppose that you are a chemist working for a company that is creating a new line of air fresheners. The company is considering three scents: apple, pear, and pineapple. The project manager has asked you to prepare the ester compounds that are largely responsible for these scents. The structural formulas for these ester compounds are shown here:



To prepare these esters, you have been given the alcohols listed in the table and an adequate supply of all other necessary reagents, solvents, and equipment.

Alcohols for Air Freshener Project

Reagent	Molar mass (g/mol)	Density (g/mL)	Cost, per 1.00 L
methanol	32.04	0.79	\$46.20
ethanol	46.07	0.79	\$112.00
1-propanol	60.10	0.80	\$72.70
1-butanol	74.12	0.81	\$72.60

Use the structural formulas of the alcohols and information in the table to answer these questions:

- Provide a name for each ester that you will prepare.
- Draw the structure of each alcohol listed in the table.
- Determine the procedure you will use to prepare each ester, using the reactions found in this chapter. (*Hint:* Recall that esters are derived from a carboxylic acid and an alcohol.)
- Calculate the cost to prepare 100.0 g of each ester. Which one will be the most expensive to prepare? Which ester will be the least expensive? (Consider only the cost of the alcohols in the table, and disregard the costs of other reagents. Assume 100% yield for all reactions.)

ANSWERS TO CONCEPTUAL CONNECTIONS

Cc 21.1 (d) The others are simply the same structure drawn in slightly different ways.

Cc 21.2 (b) This structure is the only one that contains a carbon atom (the one on the left) with four different substituent groups attached (a Br atom, a Cl atom, an H atom, and a CH₃ group).

Cc 21.3 (b) Pentane; because the longest continuous chain contains five carbon atoms.

Cc 21.4 (c, d, a, b) Oxidation includes the gain of oxygen or the loss of hydrogen.

22.1 The Colors of Rubies and Emeralds 985

22.2 Properties of Transition Metals 986

22.3 Coordination Compounds 990

22.4 Structure and Isomerization 995

22.5 Bonding in Coordination Compounds 999

22.6 Applications of Coordination Compounds 1005

Key Learning Outcomes 1008



To:
The one in the highest
orbital

The color of ruby is caused by a splitting of the d -orbital energy levels in Cr^{3+} by the host crystal.

Transition Metals and Coordination Compounds

IN THIS CHAPTER, WE EXAMINE the chemistry of the transition metals and an important class of their compounds called coordination compounds. We discuss how coordination compounds form all of the types of isomers that we have studied so far, as well as some new types. In our examination of the transition metals, we draw on much of what we learned in Chapters 2 and 3 about electronic structure and periodicity. We also briefly revisit valence bond theory to explain bonding in coordination compounds, but we quickly shift to a different theory—crystal field theory—that better explains many of the properties of these compounds. Transition metals and coordination compounds are important, not only because of their interesting chemistry, but because of their numerous applications. Coordination compounds are the basis for a number of therapeutic drugs, chemical sensors, and coloring agents. In addition, many biological molecules contain transition metals that bond in ways that are similar to coordination compounds.

“Chemistry must become the astronomy of the molecular world.”

—Alfred Werner (1866–1919)

22.1 The Colors of Rubies and Emeralds

Rubies are deep red and emeralds are brilliant green, yet the color of both gemstones is caused by the same ion, Cr^{3+} . The difference lies in the crystal that hosts the ion. Rubies are crystals of aluminum oxide (Al_2O_3) in which about 1% of the Al^{3+} ions are replaced by Cr^{3+} ions. Emeralds, by contrast, are crystals of beryllium aluminum silicate $[\text{Be}_3\text{Al}_2(\text{SiO}_3)_6]$ in which a similar percentage of the Al^{3+} ions is replaced by Cr^{3+} . The embedded Cr^{3+} ion is red in the aluminum oxide crystal but green in the beryllium aluminum silicate crystal. Why?

The answer to this question lies in the effect that the host crystal has on the energies of the atomic orbitals in Cr^{3+} . Atoms in the crystal create a field around the ion—sometimes called the *crystal field*—that splits the five normally degenerate *d* orbitals into two or more levels. The color of the gemstone is caused by electron transitions between these levels. In rubies, the crystal field is stronger (and the corresponding splitting of the *d* orbitals greater) than it is in emeralds. Recall from Chapter 2 that the color of a



▲ **Ruby and Emerald** The Cr^{3+} ion is responsible for both the red color of ruby and the green color of emerald.

substance depends on the colors *absorbed* by that substance, which in turn depends on the energy differences between the orbitals involved in the absorption. The greater splitting in ruby results in a greater energy difference between the d orbitals of Cr^{3+} and, consequently, the absorption of a different color of light than in emerald. Here we see the theme of this book repeated yet again—the structure that surrounds the Cr^{3+} ion determines its color.

The splitting of the d orbitals in transition metal ions embedded within host crystals also is responsible for the colors of several other gemstones. For example, the red in garnet, which has $\text{Mg}_3\text{Al}_2(\text{SiO}_4)_3$ as a host crystal, and the yellow-green of peridot, which has Mg_2SiO_4 as a host crystal, are both caused by electron transitions between d orbitals in Fe^{2+} . Similarly, the blue in turquoise, which has $[\text{Al}_6(\text{PO}_4)_4(\text{OH})_8 \cdot 4 \text{H}_2\text{O}]^{2-}$ as a host crystal, is caused by transitions between the d orbitals in Cu^{2+} .

In this chapter, we examine the properties of the transition metals and their ions more closely. We also examine the properties of coordination compounds in some detail. We first discussed this common type of transition metal compound in Chapter 17 (see Section 17.7). In a coordination compound, bonds to a central metal ion split the d orbitals much as they are split in the crystals of gemstones. The theory that explains these splittings and the corresponding colors is **crystal field theory**, which we also explore in this chapter.



▲ **Garnet, Peridot, and Turquoise** The red in garnet and the yellow-green of peridot are both caused by Fe^{2+} . The blue of turquoise is caused by Cu^{2+} .

TABLE 22.1 First-Row Transition Metal Orbital Occupancy

	4s	3d				
Sc	↑↓	↑				
Ti	↑↓	↑	↑			
V	↑↓	↑	↑	↑		
Cr	↑	↑	↑	↑	↑	↑
Mn	↑↓	↑	↑	↑	↑	↑
Fe	↑↓	↑↓	↑	↑	↑	↑
Co	↑↓	↑↓	↑↓	↑	↑	↑
Ni	↑↓	↑↓	↑↓	↑↓	↑	↑
Cu	↑	↑↓	↑↓	↑↓	↑↓	↑↓
Zn	↑↓	↑↓	↑↓	↑↓	↑↓	↑↓

22.2 Properties of Transition Metals

Transition metals have more uniform properties than the main-group elements. For example, almost all transition metals have moderate to high densities, good electrical conductivity, high melting points, and moderate to extreme hardness. Their similar properties are related to their similar electron configurations: They all have electrons in d orbitals that can be involved in metallic bonding. In spite of their similarities, however, each element is also unique, and they exhibit a wide variety of chemical behavior. Before we examine some of the periodic properties of the transition metals, let's review the electron configurations of these elements, first discussed in Chapter 3.

Electron Configuration

Recall from Section 3.4 that, as we move to the right across a row of transition elements, electrons are added to $(n - 1)d$ orbitals (where n is the row number in the periodic table and also the quantum number of the highest occupied principal level). For example, as we move across the fourth-period transition metals, electrons are added to the $3d$ orbitals, as shown in Table 22.1.

In general, the ground state electron configuration for the first two rows of transition elements is [noble gas] $ns^2(n - 1)d^x$, and for the third and fourth rows it is [noble gas] $ns^2(n - 2)f^{14}(n - 1)d^x$, where x ranges from 1 to 10. Recall also from Section 3.4, however, that because the ns and $(n - 1)d$ sublevels are close in energy, many exceptions occur. For example, in the first transition series of the d block, the outer configuration is $4s^23d^x$ with

two exceptions: Cr is $4s^13d^5$ and Cu is $4s^13d^{10}$. This behavior is related to the closely spaced $3d$ and $4s$ energy levels and the stability associated with a half-filled or completely filled d sublevel.

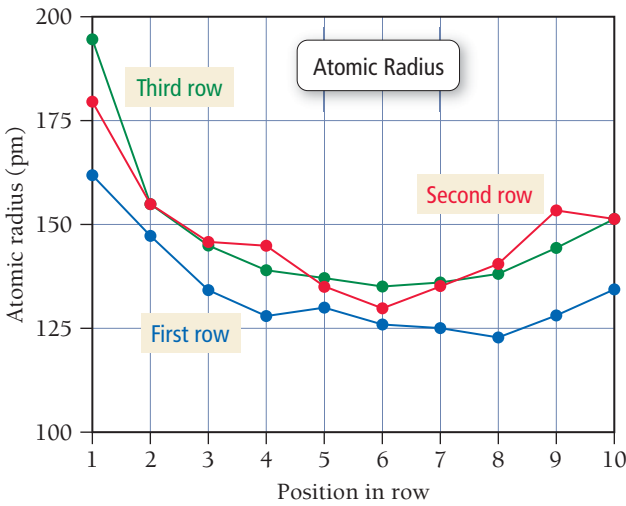
Recall from Section 3.7 that the transition metals form ions by losing electrons from the ns orbital *before* losing electrons from the $(n - 1)d$ orbitals. For example, Fe^{2+} has an electron configuration of $[Ar] 3d^6$ because it has lost both of the $4s$ electrons to form the $2+$ charge. Examples 22.1 and 22.2 review the steps in writing electron configurations for transition metals and their ions.

EXAMPLE 22.1			EXAMPLE 22.2		
PROCEDURE FOR Writing Electron Configurations			Writing Electron Configurations for Transition Metals		
Write the ground state electron configuration for Zr.			Write the ground state electron configuration for Co^{3+} .		
SOLUTION			SOLUTION		
[Kr]			[Ar]		
Zr is in the fifth period, so the orbitals used are			Co is in the fourth period, so the orbitals used are		
[Kr] $5s4d$			[Ar] $4s3d$		
Zr has four more electrons than Kr.			Co has nine more electrons than Ar.		
[Kr] $5s^24d^2$			[Ar] $4s^23d^7$		
Co ³⁺ has lost three electrons relative to the Co atom.			[Ar] $4s^03d^6$ or [Ar] $3d^6$		
FOR PRACTICE 22.1			FOR PRACTICE 22.2		
Write the ground state electron configuration for Os.			Write the ground state electron configuration for Nb^{2+} .		

Atomic Size


As we discussed in Section 3.6, for main-group elements, the size of atoms decreases across a period and increases down a column. For transition metals, however, there is little variation in size across a row (other than for the first two elements in each transition metal row, such as Sc and Ti in the first row), as shown in **Figure 22.1** ▶. The reason for the difference is that, across a row of transition elements, the number of electrons in the outermost principal energy level (highest n value) is nearly constant. As another proton is added to the nucleus with each successive element,

▶ **FIGURE 22.1 Trends in Atomic Radius** With the exception of a decrease in radius from the first to the second element, there is only a small variation in atomic radius across each transition metal row. There is a small and expected increase in radius from the first to the second transition metal row but virtually no difference in radius from the second to the third.



another electron is added as well, but the electron goes into an $n - 1$ orbital. The number of outermost electrons thus stays the same, and the electrons experience a roughly constant effective nuclear charge as we move across the row, keeping the radii approximately constant.

Looking down a group, we see a small but expected increase in size from the first transition metal row to the second, but the size of elements in the third row is about the same as it is for those in the second row. This pattern is also different from that of the main-group elements, especially when we consider that in any given column, the third transition row has 32 more electrons than the second row. The third transition row elements are not larger because 14 of the 32 electrons are in a $(n - 2)f$ sublevel, and while electrons in f orbitals are in lower principal quantum levels, they are not very effective at shielding the outer electrons from nuclear charge. Consequently, the outer electrons are held more tightly by the nucleus, offsetting the typical increase in size between the periods. This effect is called the **lanthanide contraction**.



22.1

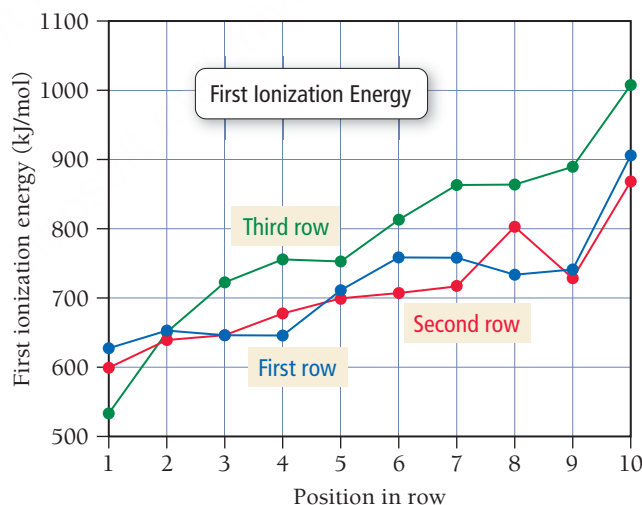
Conceptual
Connection

Atomic Size

Which element has the larger atomic radius, Fe or W?

Ionization Energy

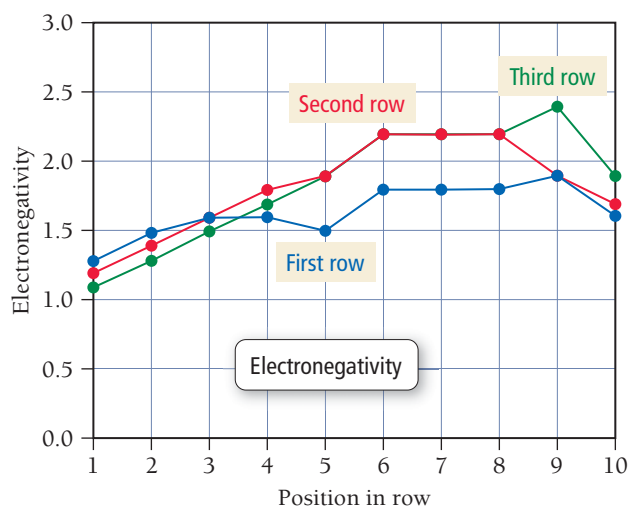
The first ionization energies of transition elements follow the expected main-group periodic trend and slowly increase across each transition metal row (Figure 22.2 ▼), but the increase is smaller than for main-group elements. As we move down a group, we see that the third transition row generally has a higher ionization energy than do the first two rows, a trend counter to that observed in the main-group elements. In the transition elements the charge of the nucleus increases substantially from one row to the next, but there is only a small increase in atomic size between the first and second rows, and no increase in size is observed between the second and third rows. The outer electrons are therefore held more tightly in the third transition row than in the first two rows.



► **FIGURE 22.2 Trends in First Ionization Energy** First ionization energy generally increases across each transition metal row, following the main-group trend. However, in contrast to the main-group trend, the third transition metal row has a greater ionization energy than the first and second rows.

Electronegativity

The electronegativity values of the transition metals, like their ionization energies, follow the main-group trend and slowly increase across a row, as shown in Figure 22.3 ►. The increase is smaller than the increase that occurs in the main-group elements, but we would expect that given the similarity in the sizes of the atoms across the transition metal rows. The trend in electronegativity values down a group (or column) is another example of the transition metals behaving differently from the main-group elements. The electronegativity values generally increase from the first transition metal row to the second, but there is no further increase for the third row. In the main-group elements, by contrast, we see a *decrease* in electronegativity down a group.

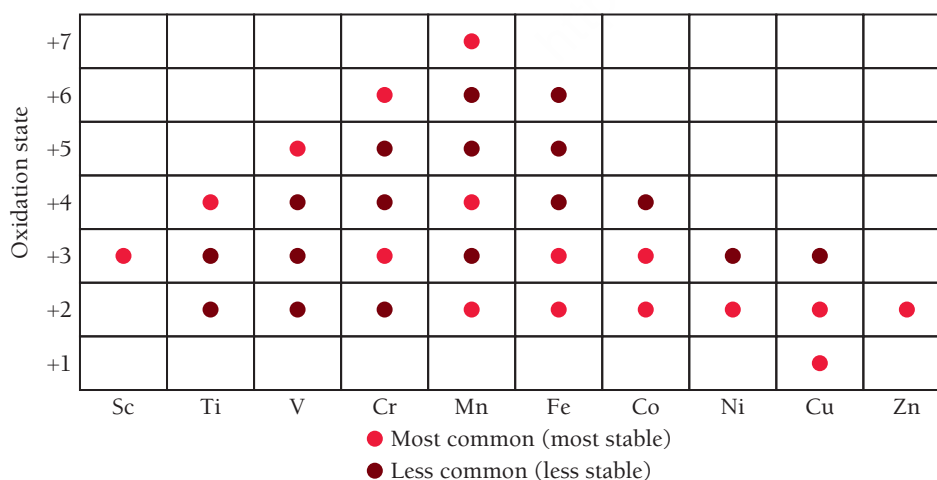


▲ FIGURE 22.3 Trends in Electronegativity The electronegativity of the transition metal elements generally increases across a row, following the main-group trend. However, in contrast to the main-group trend, electronegativity increases from the first transition metal row to the second. There is little electronegativity difference between the second and third transition rows.

The difference is again caused by the relatively small change in atomic size as we move down a column for the transition elements, accompanied by a large increase in nuclear charge. One of the heaviest metals, gold (Au), is also the most electronegative metal. Its electronegativity value ($EN = 2.4$) is even higher than that of some nonmetals (EN of P is 2.1), and compounds of an Au^- ion have been observed.

Oxidation State

Unlike main-group metals, which tend to exhibit only one oxidation state, the transition metals often exhibit a variety of oxidation states (**Figure 22.4** ▼). The highest oxidation state for a transition metal is +7 for manganese (Mn). The electron configuration of manganese in this oxidation state corresponds to the loss of all the electrons in the 4s and 3d orbitals, leaving a noble gas electron configuration ([Ar]). This is the same configuration we see for all of the highest oxidation states of the elements to the left of Mn. To the right of manganese, the oxidation states are all lower, mostly +2 or +3. A +2 oxidation state for a transition metal is not surprising, since 4s electrons are readily lost.



▲ FIGURE 22.4 First-Row Transition Metal Oxidation States The transition metals exhibit many more oxidation states than the main-group elements. These oxidation states range from +7 to +1.

In some rare cases, oxidation states higher than +7 have been observed.

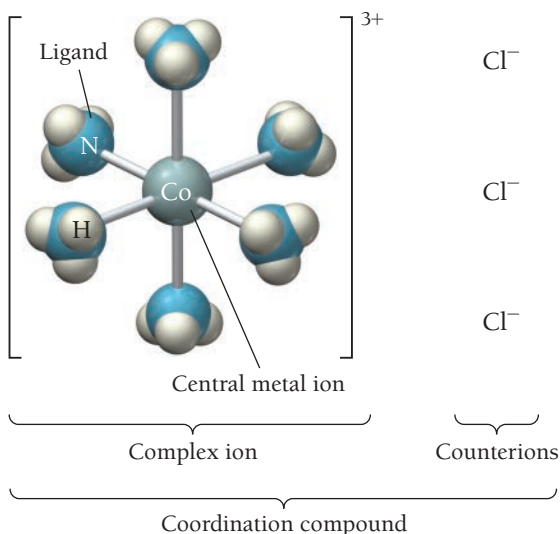
Metals in high-oxidation states, such as +7, exist only when the metal is bound to a highly electronegative element such as oxygen; they do not exist as bare ions.

22.3 Coordination Compounds

We discussed at the end of Chapter 17 that transition metals tend to form *complex ions*. A **complex ion** contains a central metal ion bound to one or more *ligands*. A **ligand** is a Lewis base (or electron donor) that forms a bond with the metal. When a complex ion combines with one or more *counterions* (ions of opposite charge that are not acting as ligands), the resulting neutral compound is a **coordination compound**.

The first coordination compounds were discovered in the early eighteenth century, but their nature was not understood until nearly 200 years later. Swiss chemist Alfred Werner (1866–1919) studied coordination compounds extensively—especially a series of cobalt(III) compounds with ammonia, which had formulas that at that time were written as $\text{CoCl}_3 \cdot 6 \text{NH}_3$, $\text{CoCl}_3 \cdot 5 \text{NH}_3$, and $\text{CoCl}_3 \cdot 4 \text{NH}_3$. In 1893, he proposed that the central metal ion has two types of interactions, which he named **primary valence** and **secondary valence**. The primary valence is the oxidation state on the central metal atom, and the secondary valence is the number of molecules or ions (ligands) directly bound to the metal atom, called the **coordination number**. In $\text{CoCl}_3 \cdot 6 \text{NH}_3$ the primary valence is +3, and the ammonia molecules are directly bound to the central cobalt, giving a coordination number of 6. Today we write the formula of this compound as $[\text{Co}(\text{NH}_3)_6]\text{Cl}_3$ to better represent the coordination compound as the combination of a complex ion, $\text{Co}(\text{NH}_3)_6^{3+}$, and three Cl^- counterions.

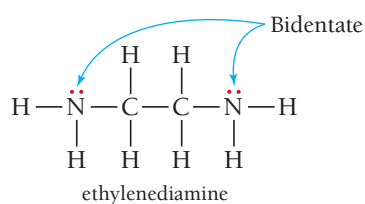
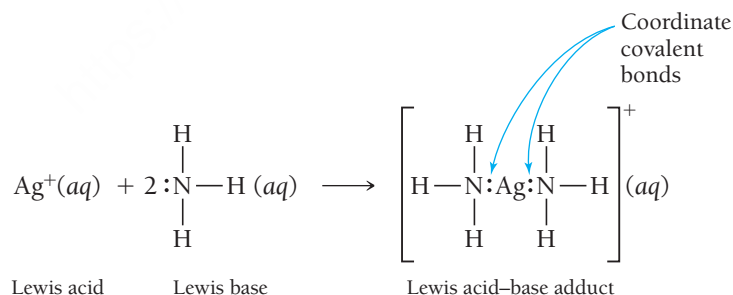
We write the formulas of the other cobalt(III) coordination compounds studied by Werner as $[\text{Co}(\text{NH}_3)_5\text{Cl}]\text{Cl}_2$ and $[\text{Co}(\text{NH}_3)_4\text{Cl}_2]\text{Cl}$. In these two cases, the complex ions are $\text{Co}(\text{NH}_3)_5\text{Cl}^{2+}$ (with two Cl^- counterions) and $\text{Co}(\text{NH}_3)_4\text{Cl}_2^+$ (with one Cl^- counterion), respectively. With this series of compounds, Werner demonstrated that the Cl^- can replace NH_3 in the secondary valence. In other words, Cl^- can act as a counterion, or it can bond directly to the metal as a ligand and, therefore, be part of the complex ion.



▲ **Coordination Compound** A coordination compound contains a complex ion and corresponding counterions. The complex ion contains a central metal atom coordinated to several ligands. The compound shown here is $[\text{Co}(\text{NH}_3)_6]\text{Cl}_3$.

Ligands

The complex ion itself contains the metal ion in the center and the ligands—which can be neutral molecules or ions—arranged around it. We can think of the metal–ligand complex as a Lewis acid–base adduct (see Section 16.11) because the bond is formed when the ligand donates a pair of electrons to an empty orbital on the metal. For example, consider the reaction between the silver ion and ammonia:



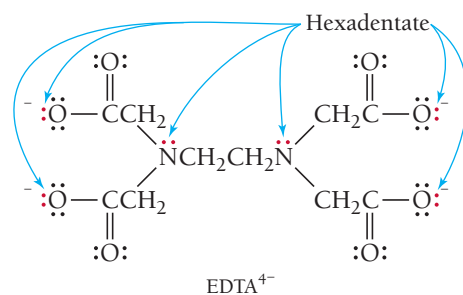
A bond of this type, which we first encountered in Sections 5.5 and 6.2, is a **coordinate covalent bond**. Ligands are therefore good Lewis bases and have at least one pair of electrons to donate to, and bond with, the central metal ion. Table 22.2 contains a number of common ligands.

Ligands that donate only one electron pair to the central metal are **monodentate**. Some ligands, however, have the ability to donate two pairs of electrons (from two different atoms) to the metal; these are **bidentate**. Examples of bidentate ligands include the oxalate ion (abbreviated ox) and the ethylenediamine molecule (abbreviated en), which we show in the left margin. **Figure 22.5a** on p. 992 shows the ethylenediamine ligand bonded to Co^{3+} .

TABLE 22.2 Common Ligands

Name	Lewis structure
water	$\text{H}-\ddot{\text{O}}-\text{H}$
ammonia	$\begin{array}{c} \text{H}-\ddot{\text{N}}-\text{H} \\ \\ \text{H} \end{array}$
chloride ion	$[\ddot{\text{Cl}}:]^{-}$
carbon monoxide	$:\text{C}\equiv\text{O}:$
cyanide ion	$[\text{C}\equiv\text{N}]^{-}$
thiocyanate ion	$[\ddot{\text{S}}=\text{C}=\ddot{\text{N}}:]^{-}$
oxalate ion (ox)	$\left[\begin{array}{cc} \ddot{\text{O}} & \ddot{\text{O}} \\ \diagdown & / \\ \text{C} & - & \text{C} \\ / & \diagdown \\ \ddot{\text{O}} & \ddot{\text{O}} \end{array} \right]^{2-}$
ethylenediamine (en)	$\begin{array}{c} \text{H} & \text{H} \\ & \\ \text{H}-\ddot{\text{N}}-\text{C}-\text{C}-\ddot{\text{N}}-\text{H} \\ & \\ \text{H} & \text{H} \end{array}$
ethylenediaminetetraacetate (EDTA)	$\left[\begin{array}{cc} \text{:O:} & \text{:O:} \\ & \\ \text{:}\ddot{\text{O}}\text{--CCH}_2 & \text{CH}_2\text{C--}\ddot{\text{O}}\text{:} \\ & \\ \text{NCH}_2\text{CH}_2\text{N} & \\ & \\ \text{:}\ddot{\text{O}}\text{--CCH}_2 & \text{CH}_2\text{C--}\ddot{\text{O}}\text{:} \\ & \\ \text{:O:} & \text{:O:} \end{array} \right]^{4-}$

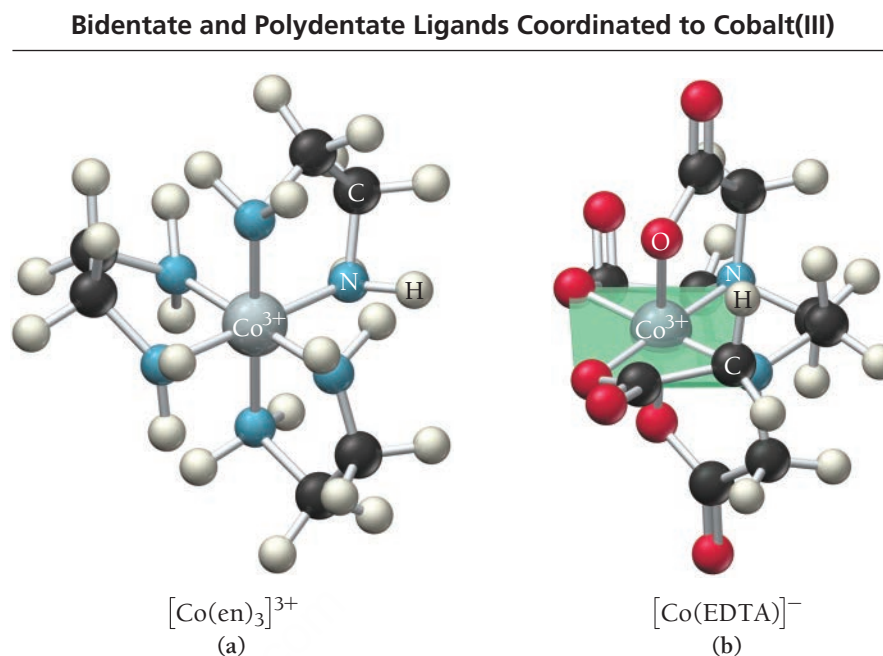
Some ligands, called **polydentate** ligands, can donate even more than two electron pairs (from more than two atoms) to the metal. The most common polydentate ligand is the ethylenediaminetetraacetate ion (EDTA^{4-}) shown here:



The EDTA ligand wraps itself completely around the metal, donating up to six pairs of electrons (**Figure 22.5b** on the next page ►). A complex ion that contains either a bidentate or polydentate ligand is a **chelate** (pronounced “key-late”), and the coordinating ligand is known as a **chelating agent**.

► **FIGURE 22.5 Bidentate and Polydentate Ligands Coordinated to Co(III)**
Ligands Coordinated to Co(III)

(a) Ethylenediamine is a bidentate ligand;
 (b) EDTA is a hexadentate ligand.


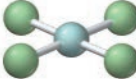
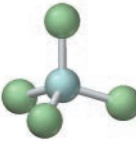
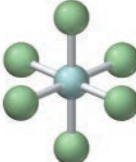


Coordination Numbers and Geometries

A survey of many coordination compounds shows that coordination numbers can vary from as low as 2 to as high as 12. The most common coordination numbers are 6, as occurs in $[\text{Co}(\text{NH}_3)_6]^{3+}$, and 4, as occurs in $[\text{PdCl}_4]^{2-}$. Coordination numbers greater than 6 are rarely observed for the first-row transition metals. Typically, only 1+ metal ions have a coordination number as low as 2, as occurs in $[\text{Ag}(\text{NH}_3)_2]^+$. Odd coordination numbers exist, but they are rare.

The common geometries of complex ions, shown in Table 22.3, depend in part on their coordination number. A coordination number of 2 results in a linear geometry, and a coordination number of 6 results in an octahedral geometry. A coordination number of 4 can have either a tetrahedral geometry or a

TABLE 22.3 Common Geometries of Complex Ions

Coordination Number	Shape	Model	Example
2	Linear		$[\text{Ag}(\text{NH}_3)_2]^+$
4	Square planar		$[\text{PdCl}_4]^{2-}$
4	Tetrahedral		$[\text{Zn}(\text{NH}_3)_4]^{2+}$
6	Octahedral		$[\text{Fe}(\text{H}_2\text{O})_6]^{3+}$

square planar geometry, depending on the number of *d* electrons in the metal ion. Metal ions with a *d*⁸ electron configuration (such as [PdCl₄]²⁻) exhibit square planar geometry, and metal ions with a *d*¹⁰ electron configuration (such as [Zn(NH₃)₄]²⁺) exhibit tetrahedral geometry.

Naming Coordination Compounds

To name coordination compounds, we follow a series of general rules based on the system originally proposed by Werner. As with ionic compounds, the name of the cation goes before the name of the anion.

Guidelines for Naming Complex Ions	Examples
<div>1. Name the ligands.</div> <div><div>• Name neutral ligands as molecules with the following notable exceptions: H₂O (aqua) NH₃ (ammine) CO (carbonyl)</div><div>• Name anionic ligands with the name of the ion plus an ending modified as follows: -ide becomes -o -ate becomes -ato -ite becomes -ito</div></div>	<div>NH₂CH₂CH₂NH₂ is ethylenediamine.</div> <div>H₂O is aqua.</div> <div>Cl⁻ is chloro. SO₄²⁻ is sulfato. SO₃²⁻ is sulfito.</div>
Table 22.4 lists the names of some common ligands.	
<div>2. List the names of the ligands in alphabetical order before the name of the metal cation.</div>	<div>Ammine (NH₃) is listed before chloro (Cl⁻), which is listed before nitrito (NO₂⁻).</div>
<div>3. Use a prefix to indicate the number of ligands (when there is more than one of a particular type): <i>di-</i> (2), <i>tris-</i> (3), <i>tetra-</i> (4), <i>penta-</i> (5), or <i>hexa-</i> (6).</div> <div>If the name of the ligand already contains a prefix, such as ethylenediamine, place parentheses around the ligand name and use <i>bis-</i> (2), <i>tris-</i> (3), or <i>tetrakis-</i> (4) to indicate the number.</div> <div>Prefixes do not affect the order in which you list the ligands.</div>	<div>Trichloro indicates three Cl⁻ ligands. Tetraammine indicates four NH₃ ligands.</div> <div>Tris(ethylenediamine) indicates three ethylenediamine ligands.</div>
<div>4. Name the metal.</div> <div><div>a. When the complex ion is a cation, use the name of the metal followed by the oxidation state written with a Roman numeral.</div><div>b. If the complex ion is an anion, drop the ending of the metal and add <i>-ate</i> followed by the oxidation state written with a Roman numeral. Some metals use the Latin root with the <i>ate</i> ending. Table 22.5 lists the names for some common metals in anionic complexes.</div></div>	<div>In cations: Co³⁺ is cobalt(III). Pt²⁺ is platinum(II). Cu⁺ is copper(I).</div> <div>In anions: Co³⁺ is cobaltate(III). Pt²⁺ is platinate(II). Cu⁺ is cuprate(I).</div>
<div>5. Write the entire name of the complex ion by listing the ligands first, followed by the metal.</div>	<div>[Pt(NH₃)₂Cl₄]²⁻ is diamminetetrachloroplatinate(II). [Co(NH₃)₆]³⁺ is hexaamminecobalt(III).</div>

TABLE 22.4 Names and Formulas of Common Ligands

Ligand	Name in Complex Ion
Anions	
bromide, Br [−]	bromo
chloride, Cl [−]	chloro
hydroxide, OH [−]	hydroxo
cyanide, CN [−]	cyano
nitrite, NO ₂ [−]	nitro
oxalate, C ₂ O ₄ ^{2−} (ox)	oxalato
ethylenediaminetetraacetate (EDTA ^{4−})	Ethylenediaminetetraacetato
Neutral molecules	
water, H ₂ O	aqua
ammonia, NH ₃	ammine
carbon monoxide, CO	carbonyl
ethylenediamine (en)	ethylenediamine

TABLE 22.5 Names of Common Metals When Found in Anionic Complex Ions

Metal	Name in Anionic Complex
chromium	chromate
cobalt	cobaltate
copper	cuprate
gold	aurate
iron	ferrate
lead	plumbate
manganese	manganate
molybdenum	molybdate
nickel	nickelate
platinum	platinate
silver	argentate
tin	stannate
zinc	zincate

When we write the *formula* of a complex ion, we write the symbol for the metal first, followed by neutral molecules and then anions. If there is more than one anion or neutral molecule acting as a ligand, we list them in alphabetical order based on the chemical symbol.

EXAMPLE 22.3

PROCEDURE FOR Naming Coordination Compounds

	Naming Coordination Compounds
	Name the compound. [Cr(H ₂ O) ₅ Cl]Cl ₂ .
Identify the cation and anion and first name the simple ion (i.e., not the complex one).	SOLUTION [Cr(H ₂ O) ₅ Cl] ²⁺ is a complex cation. Cl [−] is chloride.
Give each ligand a name and list them in alphabetical order.	H ₂ O is aqua. Cl [−] is chloro.
Name the metal ion.	Cr ³⁺ is chromium(III).
Name the complex ion by adding prefixes to indicate the number of each ligand, followed by the name of each ligand, followed by the name of the metal ion.	[Cr(H ₂ O) ₅ Cl] ²⁺ is pentaquachlorochromium(III).
Name the compound by writing the name of the cation before the anion. The only space is between ion names.	[Cr(H ₂ O) ₅ Cl]Cl ₂ is pentaquachlorochromium(III) chloride.
	FOR PRACTICE 22.3 Name the following compound: [Mn(CO)(NH ₃) ₅]SO ₄ .

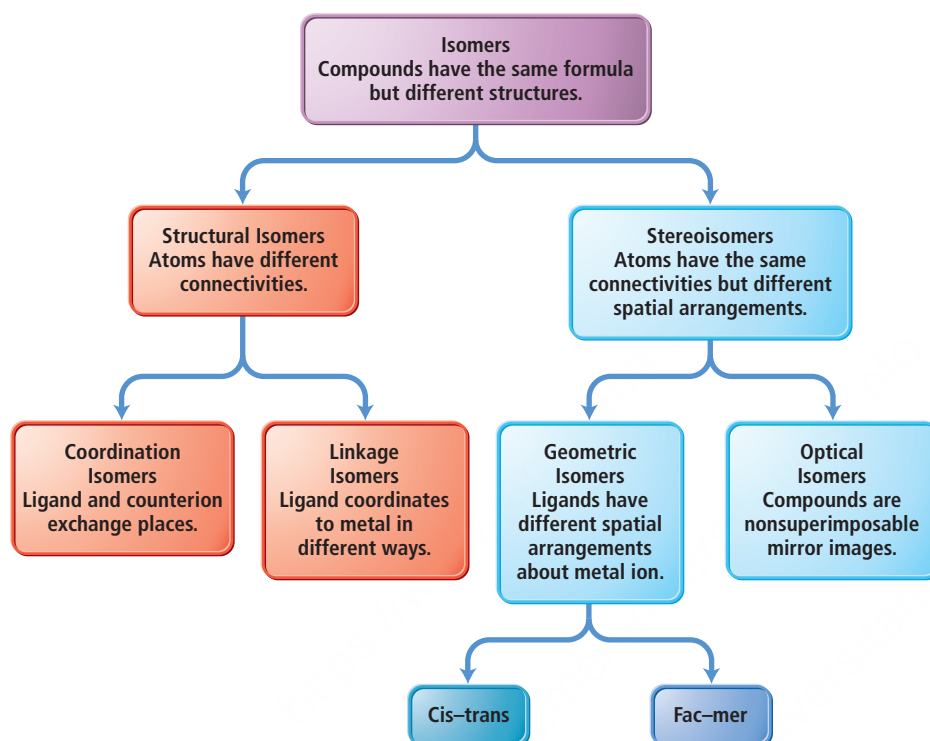
EXAMPLE 22.4

Naming Coordination Compounds

	Naming Coordination Compounds
	Name the compound. K ₃ [Fe(CN) ₆].
	SOLUTION K ⁺ is potassium. [Fe(CN) ₆] ^{3−} is a complex anion.
	CN [−] is cyano.
	Fe ³⁺ is ferrate(III) because the complex is anionic.
	[Fe(CN) ₆] ^{3−} is hexacyanoferrate(III).
	K ₃ [Fe(CN) ₆] is potassium hexacyanoferrate(III)
	FOR PRACTICE 22.4 Name the following compound: Na ₂ [PtCl ₄].

22.4 Structure and Isomerization

Isomerism is common in coordination compounds. We broadly divide the isomerism observed in coordination compounds into two categories, each with subcategories, as shown in **Figure 22.6** ▼. In **structural isomers**, atoms are connected to one another in different ways, whereas in **stereoisomers**, atoms are connected in the same way but the ligands have a different spatial arrangement about the metal atom.



▲ **FIGURE 22.6** Types of Isomers

Structural Isomerism

We subdivide the broad category of structural isomers into two types: coordination isomers and linkage isomers. **Coordination isomers** occur when a coordinated ligand exchanges places with the uncoordinated counterion. For example, two different compounds have the general formula $\text{Co}(\text{NH}_3)_5\text{BrCl}$. In one of them, the bromine coordinates to the metal and chloride is a counterion, pentaamminebromocobalt(II) chloride, $[\text{Co}(\text{NH}_3)_5\text{Br}]\text{Cl}$; in the other one, the chlorine coordinates to the metal and bromide is the counterion, pentaamminechlorocobalt(II) bromide, $[\text{Co}(\text{NH}_3)_5\text{Cl}]\text{Br}$.

Linkage isomers have ligands that coordinate to the metal in different orientations. For example, the nitrite ion (NO_2^-) has a lone pair on the N atom as well as lone pairs on the O atoms—either of the two atoms can form coordinate covalent bonds with the metal. When the nitrite ion coordinates through the N atom, it is a *nitro* ligand and is represented as NO_2^- , but when it coordinates through the O atom, it is a *nitrito* ligand and is usually represented as ONO^- . We can see an example of linkage isomerization in the yellow-orange complex ion pentaamminenitrocobalt(III), $[\text{Co}(\text{NH}_3)_5\text{NO}_2]^{2+}$, which contrasts with the red-orange complex ion pentaamminenitritocobalt(III), $[\text{Co}(\text{NH}_3)_5\text{ONO}]^{2+}$, as shown in **Figure 22.7** ► on the next page. Table 22.6 lists other ligands capable of linkage isomerization.

► **FIGURE 22.7 Linkage Isomers**

In $[\text{Co}(\text{NH}_3)_5\text{NO}_2]^{2+}$, the NO_2 ligand bonds to the central metal atom through the nitrogen atom. In $[\text{Co}(\text{NH}_3)_5\text{ONO}]^{2+}$, the NO_2 ligand bonds through an oxygen atom. The different isomers have different colors.

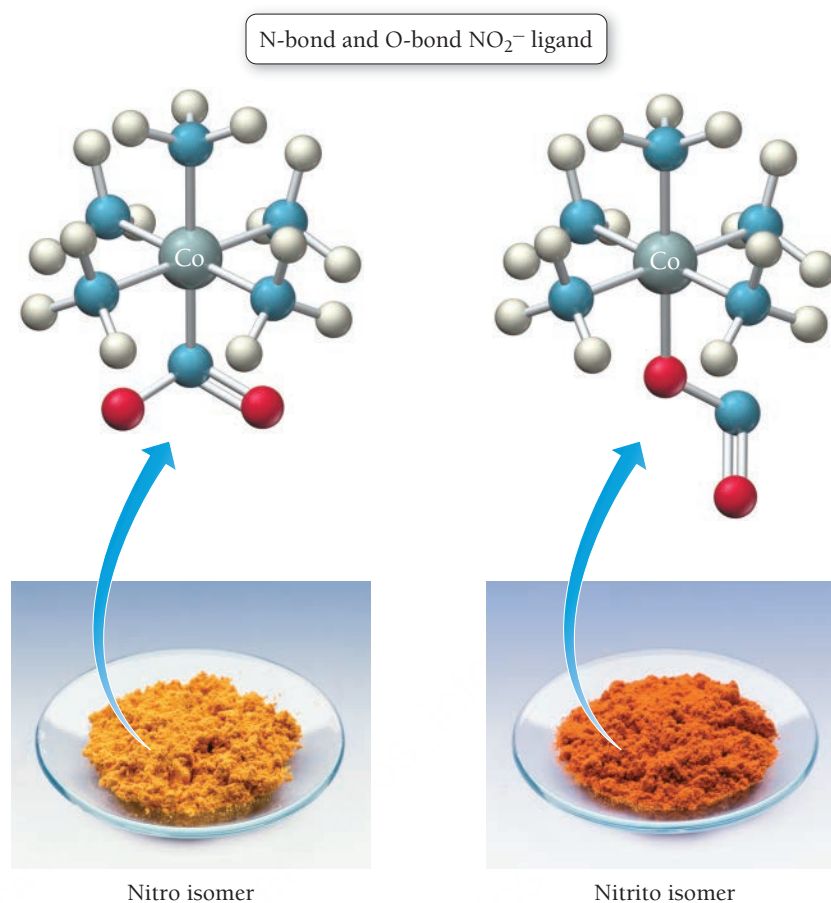
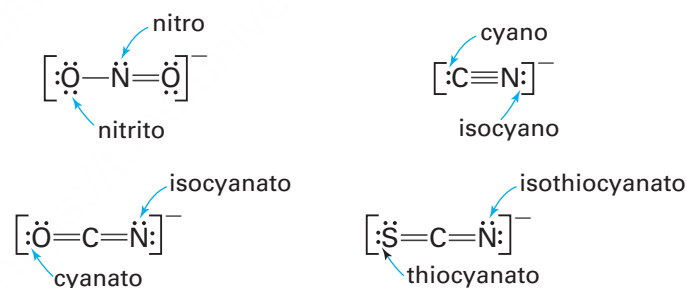


TABLE 22.6 Ligands Capable of Linkage Isomerization

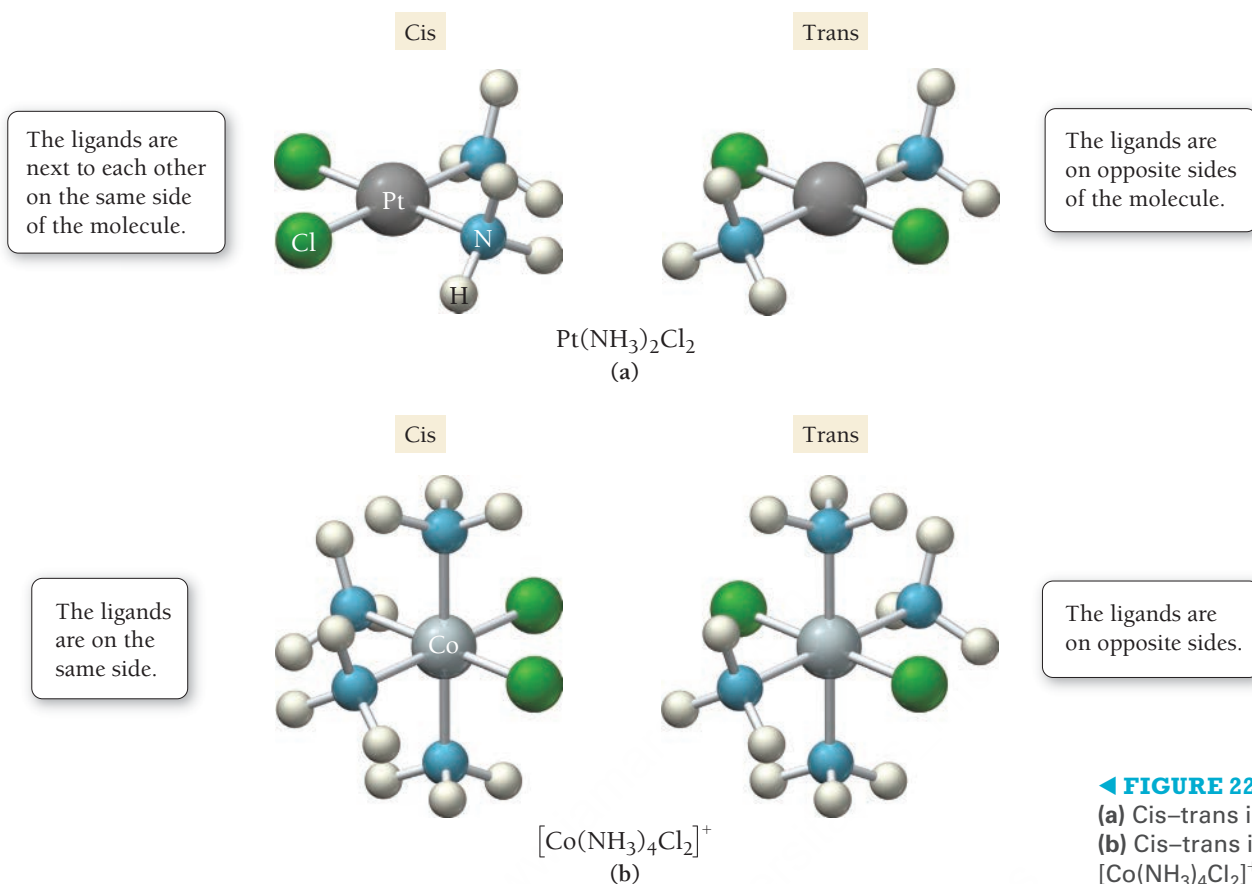


Stereoisomerism

We can also subdivide the broad category of stereoisomers into two types: geometric isomers and optical isomers. **Geometric isomers** result when the ligands bonding to the metal have a different spatial arrangement. One type of geometric isomerism, as we saw in Sections 21.3 and 21.5, is cis–trans isomerism, which in complex ions occurs in square planar complexes of the general formula MA_2B_2 or octahedral complexes of the general formula MA_4B_2 .

For example, cis–trans isomerism occurs in the square planar complex $\text{Pt}(\text{NH}_3)_2\text{Cl}_2$. **Figure 22.8a** ► shows the two distinct ways that ligands can be oriented around the metal. In one complex, the Cl^- ligands are next to each other on one side of the molecule—this is the cis isomer. In the other complex, the Cl^- ligands are on opposite sides of the molecule—this is the trans isomer.

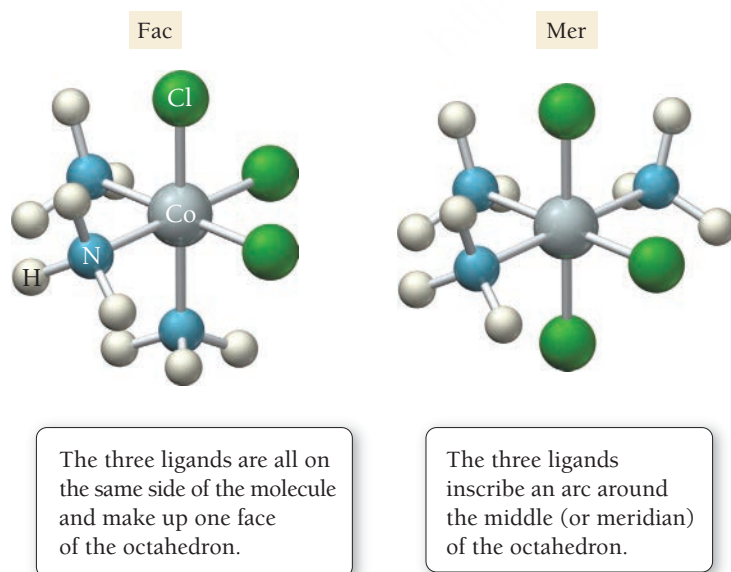
Geometric isomerism also exists in the octahedral complex ion $[\text{Co}(\text{NH}_3)_4\text{Cl}_2]^+$. As shown in **Figure 22.8b** ►, the ligands in this complex ion arrange themselves around the metal in two ways, one with the Cl^- ligands on the same side (the cis isomer) and another with the Cl^- ligands on opposite



◀ **FIGURE 22.8 Cis–trans Isomerism**
 (a) Cis–trans isomerism in square planar
 (b) Cis–trans isomerism in octahedral
 $[\text{Co}(\text{NH}_3)_4\text{Cl}_2]^+$.

sides of the metal (the trans isomer). Note that cis–trans isomerism does not occur in tetrahedral complexes because all bond angles around the metal are 109.5° , and each corner of a tetrahedron is considered to be adjacent to all three other corners.

Another type of geometric isomerism is fac–mer isomerism, which occurs in octahedral complexes of the general formula MA_3B_3 . For example, in $\text{Co}(\text{NH}_3)_3\text{Cl}_3$, the ligands arrange themselves around the metal in two ways (**Figure 22.9** ▼). In the fac isomer the three Cl^- ligands are all on one side of the molecule and make up one face of the octahedron (fac is short for facial). In the mer isomer, the three ligands form an arc around the middle of the octahedron (mer is short for meridional).



◀ **FIGURE 22.9 Fac–Mer Isomerism in $\text{Co}(\text{NH}_3)_3\text{Cl}_3$**

EXAMPLE 22.5

EXAMPLE 22.6

PROCEDURE FOR

Identifying and Drawing Geometric Isomers

Identify the coordination number and the geometry around the metal.

Identify whether this is a cis–trans or fac–mer isomerism.

Draw and label the two isomers.

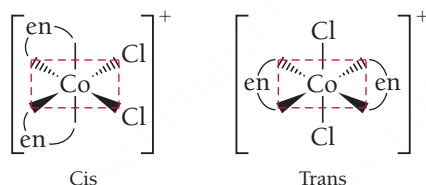
Identifying and Drawing Geometric Isomers

Draw the structures and label the type of all the isomers of $[\text{Co}(\text{en})_2\text{Cl}_2]^+$.

SOLUTION

The ethylenediamine (en) ligand is bidentate, so each occupies two coordination sites. Each Cl^- is monodentate, occupying one site. The total coordination number is 6, so this must be an octahedral complex.

With ethylenediamine occupying four sites and Cl^- occupying two sites, it fits the general formula MA_4B_2 , leading to cis–trans isomers.



FOR PRACTICE 22.5

Draw the structures and label the type of all the isomers of $[\text{Cr}(\text{H}_2\text{O})_3\text{Cl}_3]^+$.

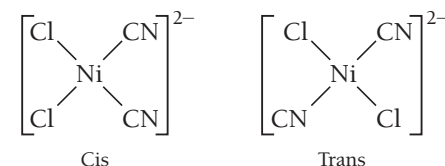
Identifying and Drawing Geometric Isomers

Draw the structures and label the type for all the isomers of $[\text{Ni}(\text{CN})_2\text{Cl}_2]^{2-}$.

SOLUTION

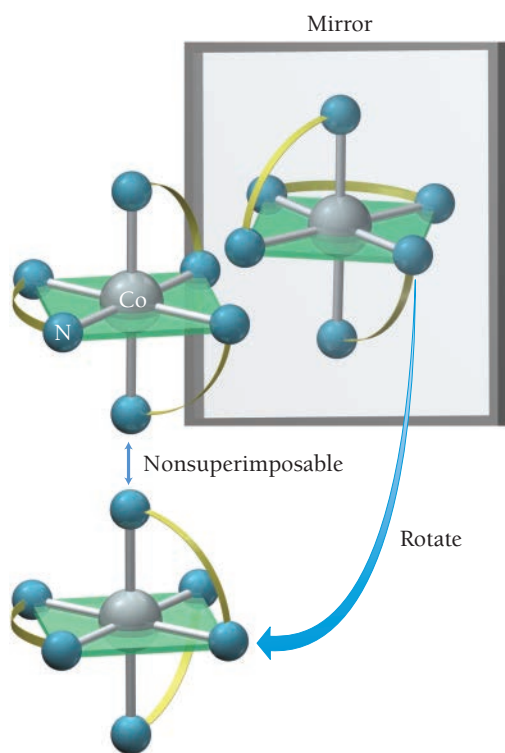
All the ligands are monodentate, so the total coordination number is 4. Ni^{2+} is a d^8 electronic configuration, so we expect a square planar complex.

Square planar complexes can only have cis–trans isomers.



FOR PRACTICE 22.6

Draw the structures and label the type of all the isomers of $[\text{Co}(\text{NH}_3)_2\text{Cl}_2(\text{ox})]^-$.



The second category of stereoisomerism is optical isomerism. Recall from Section 21.3 that **optical isomers** are nonsuperimposable mirror images of one another. If you hold your right hand up to a mirror, the image in the mirror looks like your left hand. No matter how you rotate or flip your left hand, you cannot superimpose it on your right hand. Molecules or ions that exhibit this quality are *chiral*. The isomers are *enantiomers*, and they exhibit the property of optical activity (the rotation of polarized light). The complex ion $[\text{Co}(\text{en})_3]^{3+}$ is nonsuperimposable on its mirror image, so it is a chiral complex (**Figure 22.10** ◀).

The compounds in Example 22.7 demonstrate optical isomerism in octahedral complexes. Tetrahedral complexes can also exhibit optical isomerism, but only if all four coordination sites are occupied by different ligands. Square planar complexes do not normally exhibit optical isomerism, as they are superimposable on their mirror images.

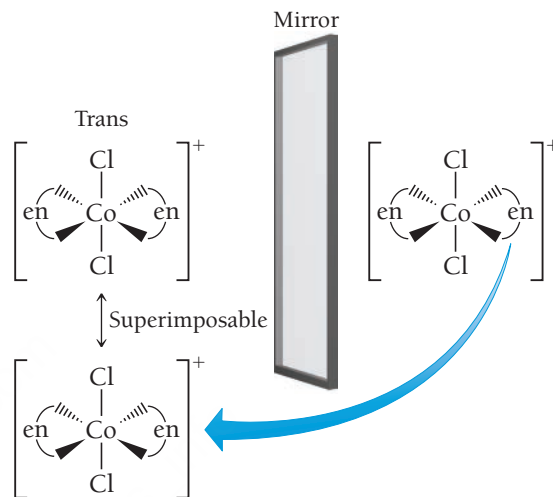
◀ **FIGURE 22.10 Optical Isomerism in $[\text{Co}(\text{en})_3]^{3+}$** The mirror images of $[\text{Co}(\text{en})_3]^{3+}$ are not superimposable. (The connected nitrogen atoms represent the ethylenediamine ligand.)

EXAMPLE 22.7**Recognizing and Drawing Optical Isomers**

Determine whether the cis or trans isomers in Example 22.5 are optically active (demonstrate optical isomerism).

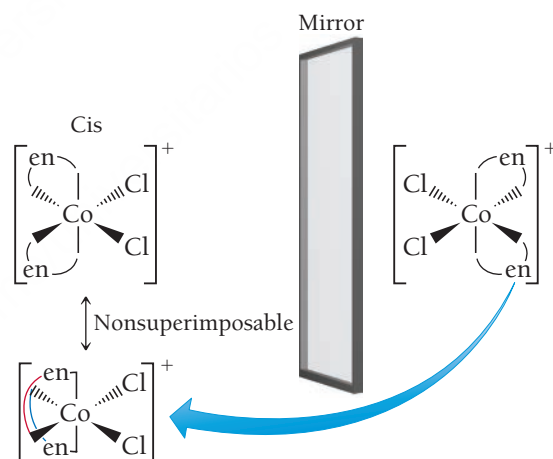
SOLUTION

Draw the trans isomer of $[\text{Co}(\text{en})_2\text{Cl}_2]^+$ and its mirror image. Check to see if they are superimposable by rotating one isomer 180° .



In this case, the two are identical, so there is no optical activity.

Draw the cis isomer and its mirror image. Check to see if they are superimposable by rotating one isomer 180° .



In this case, the two structures are not superimposable, so the cis isomer does exhibit optical activity.

FOR PRACTICE 22.7

Determine whether the fac or mer isomers of $[\text{Cr}(\text{H}_2\text{O})_3\text{Cl}_3]^+$ are optically active.





22.5 Bonding in Coordination Compounds

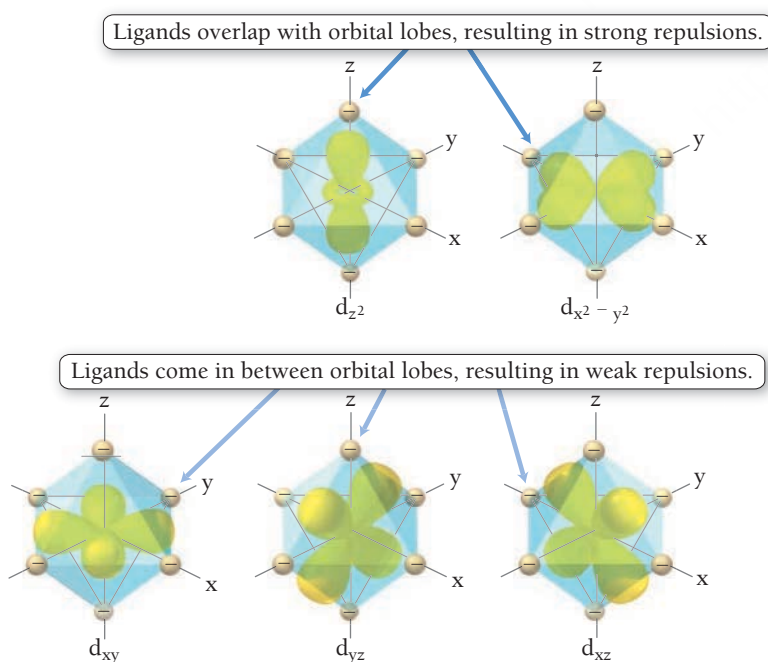
The bonding in complex ions can be described by valence bond theory (first introduced in Chapter 6). However, many of the properties of these ions are better described by a different model known as crystal field theory. We examine each model separately in this section.

Valence Bond Theory

The bonding in complex ions, particularly the geometries of the ions, can be described by one of our previous bonding models, valence bond theory. Recall from Section 6.2 that in valence bond theory, a coordinate covalent bond is the overlap between a completely filled atomic orbital and an empty atomic orbital. In complex ions, the filled orbital is on the ligand, and the empty orbital is on the metal ion. The metal ion orbitals are hybridized according to the geometry of the complex ion. The common hybridization schemes are shown in **Figure 22.11** ▼. An octahedral complex ion requires six empty orbitals in an octahedral arrangement on the metal ion. A full set of d^2sp^3 hybrid orbitals results in the exact orbitals needed for this geometry. A set of sp^3 hybrid orbitals results in a tetrahedral arrangement of orbitals; a set of dsp^2 hybrid orbitals results in a square planar arrangement; and a set of sp hybrid orbitals results in a linear arrangement of orbitals. In each case, the coordinate covalent bond is formed by the overlap between the orbitals on the ligands and the hybridized orbitals on the metal ion.

► **FIGURE 22.11 Common Hybridization Schemes in Complex Ions** The valence bond model hybridization schemes are deduced from the geometry of the complex ion.

Geometry	Hybridization	Orbitals
Linear	sp	
Tetrahedral	sp^3	
Square planar	dsp^2	
Octahedral	d^2sp^3	



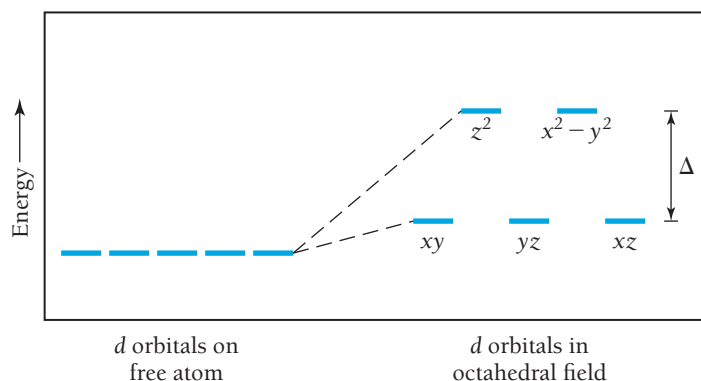
Crystal Field Theory

Crystal field theory (CFT) is a bonding model for transition metal complexes that helps us understand their colors and magnetic properties. To illustrate the basic principles of CFT, we first examine the central metal atom's d orbitals in an octahedral complex.

Octahedral Complexes and d Orbital Splitting The basic premise of CFT is that complex ions form because of attractions between the electrons on the ligands and the positive charge on the metal ion. However, the electrons on the ligands also repel the electrons in the *unhybridized* metal d orbitals. CFT focuses on these repulsions.

Figure 22.12 ◀ shows how the ligand positions superimpose on the d orbitals in an octahedral complex. Notice that the ligands in an

◀ **FIGURE 22.12 Relative Positions of d Orbitals and Ligands in an Octahedral Complex** The ligands in an octahedral complex (represented here as spheres of negative charge) interact most strongly with the d_{z^2} and $d_{x^2-y^2}$ orbitals.




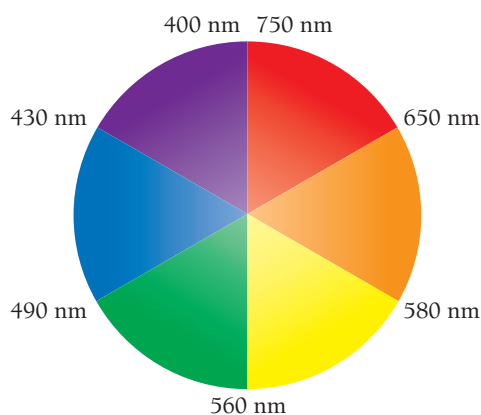
◀ **FIGURE 22.13 d Orbital Splitting in an Octahedral Field** The otherwise degenerate *d* orbitals are split into two energy levels by the ligands in an octahedral complex ion.

octahedral complex are located in the same space as the lobes of the $d_{x^2-y^2}$ and d_{z^2} orbitals. The repulsions *between* electron pairs in the ligands and any potential electrons in the *d* orbitals result in an increase in the energies of these orbitals. In contrast, the d_{xy} , d_{xz} , and d_{yz} orbitals lie *between* the axes and have nodes directly on the axes, which results in less repulsion and lower energies for these three orbitals. In other words, the *d* orbitals—which are degenerate in the bare metal ion—are split into higher- and lower-energy levels because of the spatial arrangement of the ligands (**Figure 22.13** ▲). The difference in energy between these split *d* orbitals is known as the crystal field splitting energy (Δ). The magnitude of the splitting depends on the particular complex. In **strong-field complexes**, the splitting is large, and in **weak-field complexes**, the splitting is small.

The Color of Complex Ions and Crystal Field Strength In Section 22.1, we saw that transition metals in host crystals often show brilliant colors because of the crystal field splitting of their *d* orbitals. Solutions of complex ions display brilliant colors because of similar splittings. For example, an $[\text{Fe}(\text{CN})_6]^{3-}$ solution is deep red, and an $[\text{Ni}(\text{NH}_3)_6]^{2+}$ solution is blue (**Figure 22.14** ►). Recall from Chapter 2 that the color of an object is related to the absorption of light energy by its electrons. If a substance absorbs all of the visible wavelengths, it appears black. If it transmits (or reflects) all the wavelengths (absorbs no light), it appears colorless. A substance appears to be a particular color if it absorbs some visible light but also transmits (or reflects) the wavelengths associated with that color. A substance also appears to be a given color if it transmits (or reflects) most wavelengths but absorbs the *complementary color* on a color wheel (**Figure 22.15** ▼). For example, a substance that absorbs green light (the complement of red) appears red. A solution of $[\text{Ti}(\text{H}_2\text{O})_6]^{3+}$ is purple because it absorbs strongly between 490 and 580 nm, the yellow-green region of the visible spectrum (**Figure 22.16a** ►) on the next page.

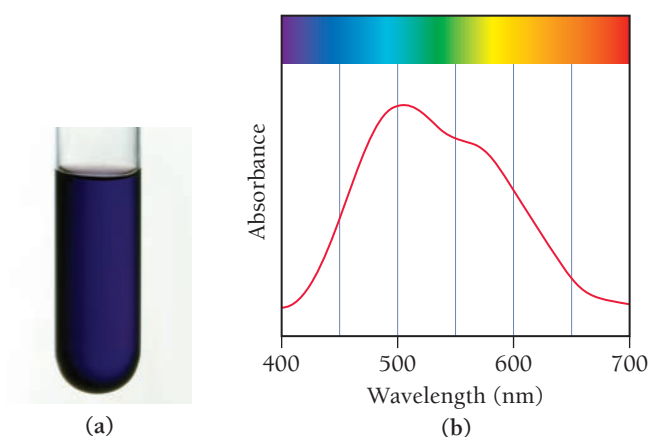
The easiest way to measure the energy difference between the *d* orbitals in a complex ion is to use spectroscopy to determine the wavelength of light absorbed when an electron makes a transition from the lower-energy *d* orbitals to the higher-energy ones. With that information we can calculate the crystal field splitting energy, Δ :

$$E_{\text{photon}} = h\nu = \frac{hc}{\lambda} = \Delta$$



▲ **FIGURE 22.14 Colors of Complex Ions** (a) The complex ion $[\text{Fe}(\text{CN})_6]^{3-}$ forms a deep red solution, and (b) $[\text{Ni}(\text{NH}_3)_6]^{2+}$ is blue.

◀ **FIGURE 22.15 The Color Wheel** Colors across from one another on the color wheel are complementary. A substance that absorbs a color on the wheel appears to be its complementary color.



Consider the $[\text{Ti}(\text{H}_2\text{O})_6]^{3+}$ absorption spectrum shown in **Figure 22.16b**. The maximum absorbance is at 498 nm. Using this wavelength, we calculate Δ :

$$\Delta = hc/\lambda = (6.626 \times 10^{-34} \text{ J} \cdot \text{s})(3.00 \times 10^8 \text{ m/s})/(498 \text{ nm} \times 1 \times 10^{-9} \text{ m/nm})$$

$$\Delta = 3.99 \times 10^{-19} \text{ J}$$

This energy corresponds to a single $[\text{Ti}(\text{H}_2\text{O})_6]^{3+}$ ion. We can convert to kilojoules per mole:

$$\Delta = (3.99 \times 10^{-19} \text{ J/ion})(6.02 \times 10^{23} \text{ ion/mol})(1 \text{ kJ}/1000 \text{ J}) = 240 \text{ kJ/mol}$$

FIGURE 22.16 The Color and Absorption Spectrum of $[\text{Ti}(\text{H}_2\text{O})_6]^{3+}$
(a) A solution containing $[\text{Ti}(\text{H}_2\text{O})_6]^{3+}$ is purple. **(b)** The absorption spectrum of $[\text{Ti}(\text{H}_2\text{O})_6]^{3+}$ extends across the green-yellow region of the spectrum.

EXAMPLE 22.8

Crystal Field Splitting Energy

The complex ion $[\text{Cu}(\text{NH}_3)_6]^{2+}$ is blue in aqueous solution. Estimate the crystal field splitting energy (in kJ/mol) for this ion.

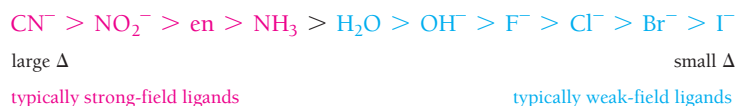
SOLUTION

Begin by consulting the color wheel (Figure 22.15) to determine approximately what wavelength is being absorbed.	Because the solution is blue, you can deduce that orange light is absorbed since orange is the complementary color to blue.
Estimate the absorbed wavelength.	The color orange ranges from 580 to 650 nm, so you can estimate the average wavelength as 615 nm.
Calculate the energy corresponding to this wavelength, using $E = hc/\lambda$. This energy corresponds to Δ .	$E = \frac{(6.626 \times 10^{-34} \text{ J} \cdot \text{s})(3.00 \times 10^8 \text{ m/s})}{(615 \text{ nm})(1 \times 10^{-9} \text{ m/nm})}$ $E = 3.23 \times 10^{-19} \text{ J} = \Delta$
Convert J/ion into kJ/mol.	$\Delta = \frac{(3.23 \times 10^{-19} \text{ J/ion})(6.02 \times 10^{23} \text{ ion/mol})}{(1000 \text{ J/kJ})}$ $\Delta = 195 \text{ kJ/mol}$

FOR PRACTICE 22.8

The complex ion $[\text{Co}(\text{NH}_3)_5\text{NO}_2]^{2+}$ is yellow. Estimate the crystal field splitting energy (in kJ/mol) for this ion.

The magnitude of the crystal field splitting in a complex ion—and, therefore whether it is a strong-field or a weak-field complex—depends in large part on the ligands attached to the central metal ion. Spectroscopic studies of various ligands attached to the same metal allow us to arrange different ligands in order of their ability to split the d orbitals. This list is known as the *spectrochemical series* and is arranged from ligands that result in the largest Δ to those that result in the smallest:



Ligands that produce large values of Δ are *strong-field ligands*, and those that give small values of Δ are *weak-field ligands*.

The metal ion also has an effect on the magnitude of Δ . If we examine different metal ions with the same ligand, we find that Δ increases as the charge on the metal ion increases. A greater charge on the metal draws the ligands closer, causing greater repulsion with the d orbitals and therefore a larger Δ . An example of this behavior occurs in the complex ions between NH_3 (a ligand in the middle of the spectrochemical series) and the +2 or +3 oxidation states of cobalt. Hexaamminecobalt(II) ion, $[\text{Co}(\text{NH}_3)_6]^{2+}$, has a weak crystal field (small Δ) and hexaamminecobalt(III) ion, $[\text{Co}(\text{NH}_3)_6]^{3+}$, has a strong field (large Δ).

Weak- and Strong-Field Ligands

Two ligands, A and B, both form complexes with a particular metal ion. When the metal ion complexes with ligand A, the resulting solution is red. When the metal ion complexes with ligand B, the resulting solution is yellow. Which of the two ligands produces the larger Δ ?

22.2

Cc

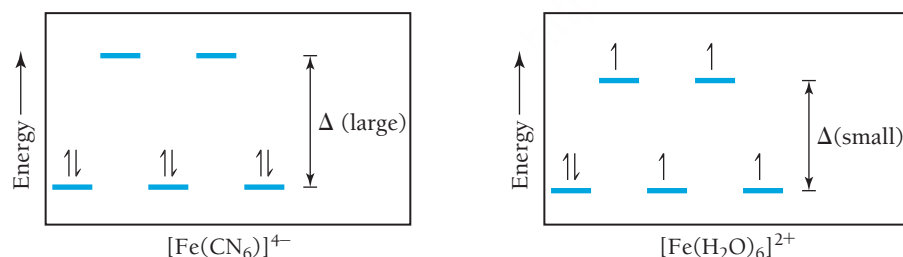
Conceptual Connection



Magnetic Properties and Crystal Field Strength The strength of the crystal field can affect the magnetic properties of a transition metal complex. Recall that, according to Hund's rule, electrons occupy degenerate orbitals singly as long as an empty orbital is available. When the energies of the d orbitals are split by ligands, the lower-energy orbitals fill first. Once they are half-filled, the next electron can either: (1) pair with an electron in one of the lower-energy half-filled orbitals by overcoming the electron–electron repulsion associated with having two electrons in the same orbital; or (2) go into an empty orbital of higher energy by overcoming the energy difference between the orbitals—in this case, the crystal field splitting energy, Δ . The magnitude of Δ compared to the electron–electron repulsions determines which of these two actually occurs.

We can compare two iron(II) complexes to see the difference in behavior under strong- and weak-field conditions. $[\text{Fe}(\text{CN})_6]^{4-}$ is known to be diamagnetic and $[\text{Fe}(\text{H}_2\text{O})_6]^{2+}$ is known to be paramagnetic. Both of these complexes contain Fe^{2+} , which has an electron configuration of $[\text{Ar}]3d^6$. In the case of $[\text{Fe}(\text{CN})_6]^{4-}$, CN^- is a strong-field ligand that generates a large Δ , so it takes more energy to occupy the higher-energy level than it does to pair the electrons in the lower-energy level. The result is that all six electrons are paired and the compound is diamagnetic, as shown in the figure on the left below.

In $[\text{Fe}(\text{H}_2\text{O})_6]^{2+}$, H_2O is a weak-field ligand that generates a small Δ , so the electron pairing energy is greater than Δ . Consequently, the first five electrons occupy the five d orbitals singly and only the sixth pairs up, resulting in a paramagnetic compound with four unpaired electrons, as shown in the figure on the right below.



In general, complexes with strong-field ligands have fewer unpaired electrons relative to the free metal ion and are therefore called **low-spin complexes**. Complexes with weak-field ligands, by contrast, have the same number of unpaired electrons as the free metal ion and are **high-spin complexes**.

When we examine the orbital diagrams of the d^1 through d^{10} metal ions in octahedral complexes, we find that only d^4 , d^5 , d^6 , and d^7 metal ions have low- and high-spin possibilities. Since there are three lower-energy d orbitals, the d^1 , d^2 , and d^3 metal ions always have unpaired electrons, independent of Δ . In the d^8 , d^9 , and d^{10} metal ions, the three lower-energy orbitals are completely filled, so the remaining electrons fill the two higher orbitals (as expected according to Hund's rule), also independent of Δ .

Recall from Section 3.7 that a paramagnetic species contains unpaired electrons and a diamagnetic one does not.

EXAMPLE 22.9**EXAMPLE 22.10****PROCEDURE FOR****Determining the Number of Unpaired Electrons in Octahedral Complexes**

Begin by determining the charge and number of d electrons on the metal.

Look at the spectrochemical series to determine whether the ligand is a strong-field or a weak-field ligand.

Decide if the complex is high- or low-spin and draw the electron configuration.

Count the unpaired electrons.

High- and Low-Spin Octahedral Complexes

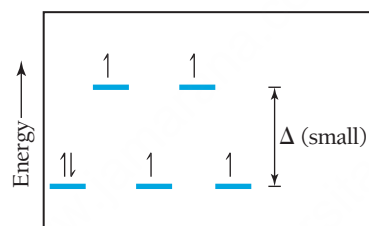
How many unpaired electrons are there in the complex ion $[\text{CoF}_6]^{3-}$?

SOLUTION

The metal is Co^{3+} and has a d^6 electronic configuration.

F^- is a weak-field ligand, so Δ is relatively small.

Weak-field ligands yield high-spin configurations.



This configuration has four unpaired electrons.

FOR PRACTICE 22.9

How many unpaired electrons are there in the complex ion $[\text{FeCl}_6]^{3-}$?

High- and Low-Spin Octahedral Complexes

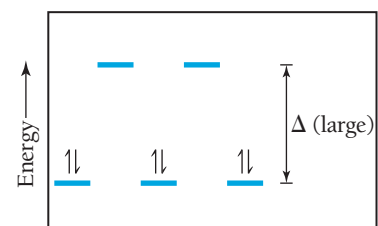
How many unpaired electrons are there in the complex ion $[\text{Co}(\text{NH}_3)_5\text{NO}_2]^{2+}$?

SOLUTION

The metal is Co^{3+} and has a d^6 electronic configuration.

NH_3 and NO_2^- are both strong-field ligands, so Δ is relatively large.

Strong-field ligands yield low-spin configurations.



This configuration has no unpaired electrons.

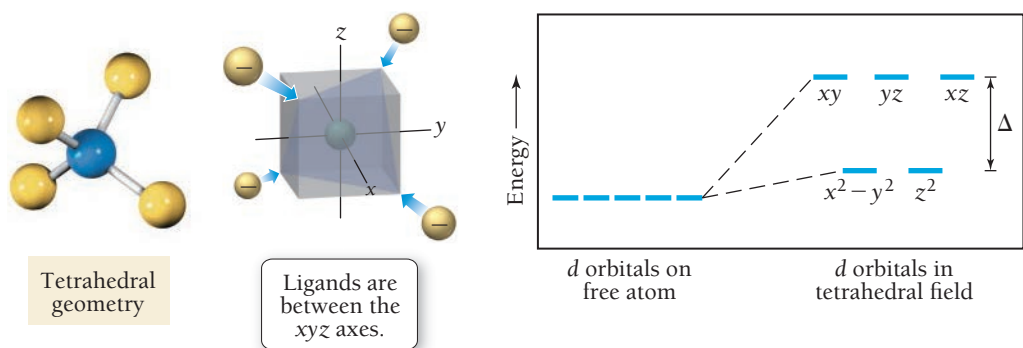
FOR PRACTICE 22.10

How many unpaired electrons are there in the complex ion $[\text{Co}(\text{CN})_6]^{4-}$?

Tetrahedral and Square Planar Complexes and d Orbital Splitting So far, we have examined the d orbital energy changes only for octahedral complexes, but transition metal complexes can have other geometries, such as tetrahedral and square planar. We use crystal field theory to determine the d orbital splitting pattern for these geometries as well. For a tetrahedral complex, the d orbital splitting pattern is the opposite of the octahedral splitting pattern: three d orbitals (d_{xy} , d_{xz} , and d_{yz}) are higher in energy, and two d orbitals ($d_{x^2-y^2}$ and d_{z^2}) are lower in energy (**Figure 22.17** ▼). Almost all tetrahedral complexes are high-spin because of reduced ligand–metal interactions. The d orbitals in a

► **FIGURE 22.17** Splitting of d Orbitals by a Tetrahedral Ligand Geometry

In tetrahedral complexes, the pattern of the splitting of the d orbitals is the opposite of the octahedral splitting pattern. The d_{xy} , d_{yz} , and d_{xz} orbitals are higher in energy than the d_{z^2} and $d_{x^2-y^2}$ orbitals.



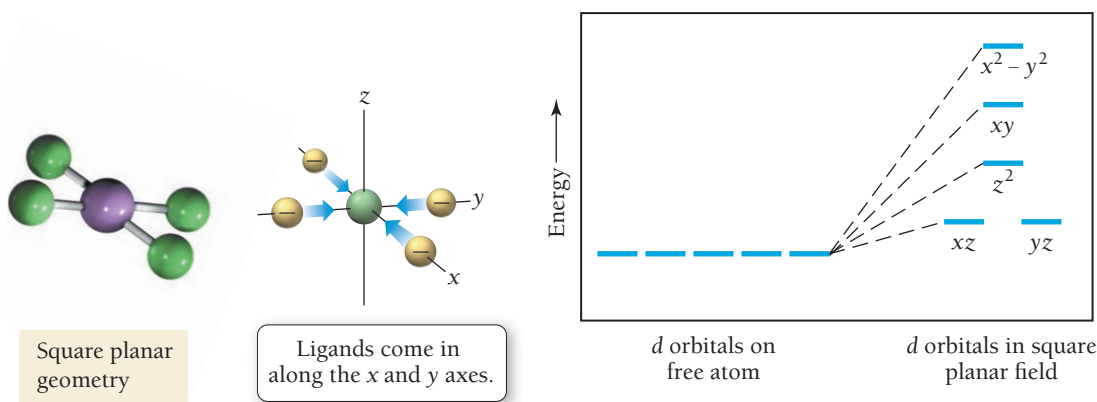


FIGURE 22.18 Splitting of d Orbitals by a Square Planar Ligand Geometry Square planar complexes produce the d orbital energy pattern shown here.

tetrahedral complex interact with only four ligands, as opposed to six in the octahedral complex, so the value of Δ is generally smaller.

A square planar complex results in the most complex splitting pattern of the three geometries (**Figure 22.18** ▲). As we discussed previously, square planar complexes occur in d^8 metal ions, such as Pt^{2+} , Pd^{2+} , Ir^+ , or Au^{3+} , and in nearly all cases they are low-spin.

22.6 Applications of Coordination Compounds

Coordination compounds are found in living systems, in industry, and even in household products. In this section, we describe a few applications of coordination compounds.

Chelating Agents

In Section 22.3, we introduced the chelating agent ethylenediaminetetraacetate ion (EDTA^{4-}). This ligand has lone pairs on six different donor atoms that can interact with a metal ion to form very stable metal complexes. EDTA is used to treat the victims of heavy metal poisoning such as lead poisoning. The patient is given $[\text{Ca}(\text{EDTA})]^{2-}$, and since the lead complex ($K_f = 2 \times 10^{18}$) is more stable than the calcium complex ($K_f = 4 \times 10^{10}$), the lead displaces the calcium. The body excretes the lead complex and leaves behind the calcium, which is nontoxic (and is in fact a nutrient).

Chemical Analysis

Some ligands are selective in their binding, preferring specific metal ions; these ligands can be used in chemical analysis. For example, dimethylglyoxime (dmg) is used to chemically analyze a sample for Ni^{2+} or Pd^{2+} . In the presence of Ni^{2+} , an insoluble red precipitate forms, and in the presence of Pd^{2+} , an insoluble yellow precipitate forms. Similarly, the SCN^- ligand is used to test for Co^{2+} or Fe^{3+} . In the presence of Co^{2+} a blue solution forms, and in the presence of Fe^{3+} a deep red solution forms (**Figure 22.19** ►).

Coloring Agents

Because of the wide variety of colors found in coordination complexes, they are often used as coloring agents. For example, a commercially available agent, iron blue, is a mixture of the hexacyano complexes of iron(II) and iron(III). Iron blue is used in ink, paint, cosmetics (eye shadow), and blueprints.

Biomolecules

Living systems contain many molecules based on metal complexes. Hemoglobin (involved in oxygen transport), cytochrome c (involved in electron transport), carbonic anhydrase (involved in respiration), and chlorophyll (involved in photosynthesis) all have coordinated metal ions that are critical to their structure and function. Table 22.7 summarizes the biological significance of many of the other first-row transition metals.


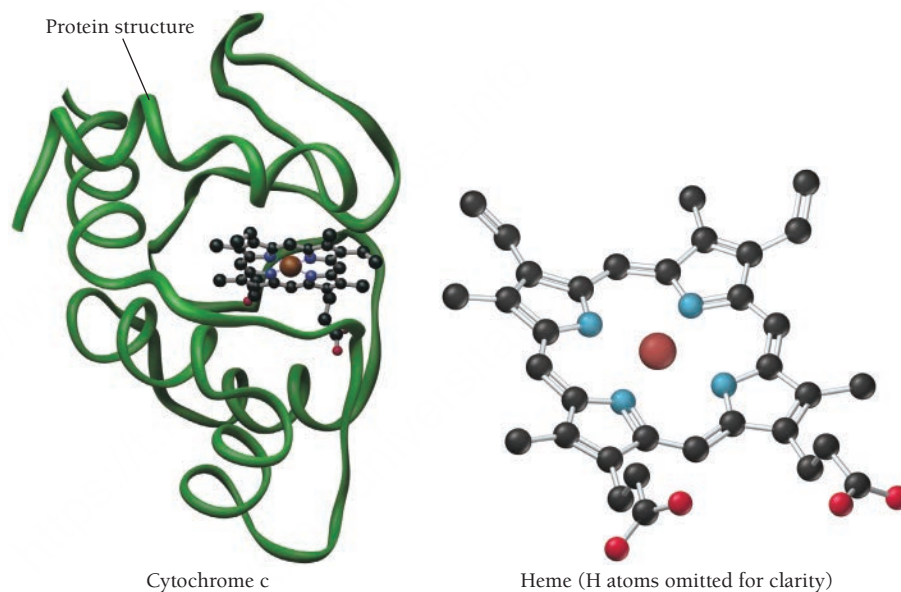


FIGURE 22.19 Chemical Analysis with SCN^- (a) Blue indicates Co^{2+} . (b) Red indicates Fe^{3+} .

TABLE 22.7 Transition Metals and Some of Their Functions in the Human Body

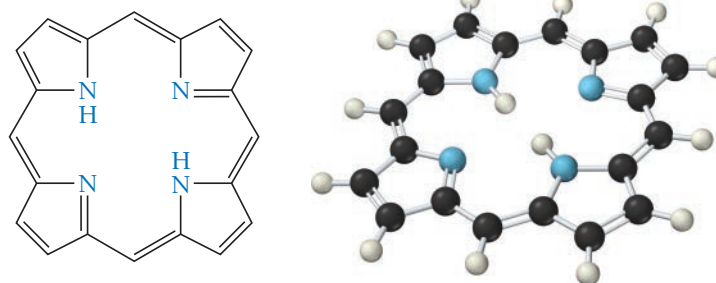
Transition Metal	Biological Function
chromium	Works with insulin to control utilization of glucose
manganese	Fat and carbohydrate synthesis
molybdenum	Involved in hemoglobin synthesis
iron	Oxygen transport
copper	Involved in hemoglobin synthesis
zinc	Involved in cell reproduction and tissue growth; part of more than 70 enzymes; assists in the utilization of carbohydrate, protein, and fat

Hemoglobin and Cytochrome c In hemoglobin and in cytochrome c, an iron complex called a heme is connected to a protein. A heme is an iron ion coordinated to a flat, polydentate ligand called a porphyrin. The porphyrin ligand has a planar ring structure with four nitrogen atoms that can

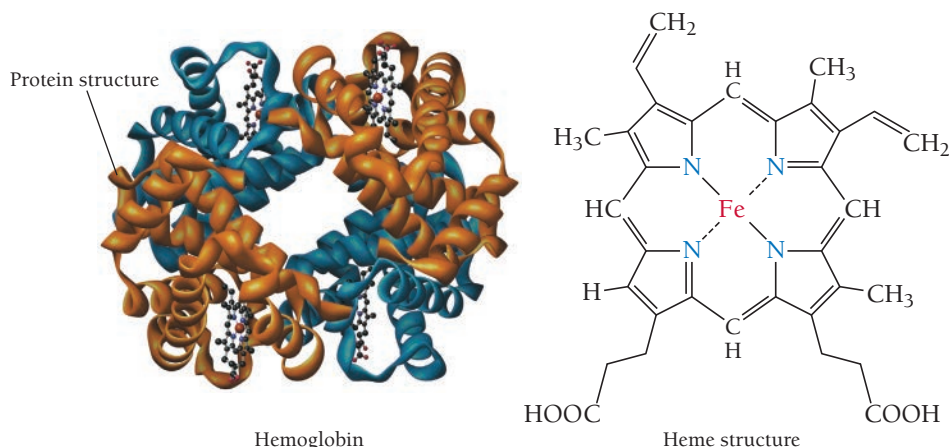


coordinate to the metal ion (**Figure 22.20 ▼**). Different porphyrins have different substituent groups connected around the outside of the ring.

In hemoglobin, the iron complex is octahedral, with the four nitrogen atoms of the porphyrin in a square planar arrangement around the metal. A nitrogen atom from the protein occupies the fifth coordination site, and either O_2 or H_2O occupies the last coordination site (**Figure 22.21 ►**). In the lungs, where the oxygen content is high, the hemoglobin coordinates to an O_2 molecule. The oxygen-rich hemoglobin is carried by the bloodstream to areas throughout the body that are depleted in oxygen, where oxygen is released and replaced by a water molecule. The hemoglobin then travels back to the lungs to repeat the cycle.



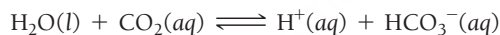
► **FIGURE 22.20 Porphyrin** A porphyrin has four nitrogen atoms that can coordinate to a central metal atom.



◀ **FIGURE 22.21 Hemoglobin** In hemoglobin, the iron complex is octahedral, with the four nitrogen atoms of the porphyrin in a square planar arrangement around the metal. A nitrogen atom from a nearby amino acid of the protein occupies the fifth coordination site, and either O_2 or H_2O occupies the last coordination site.

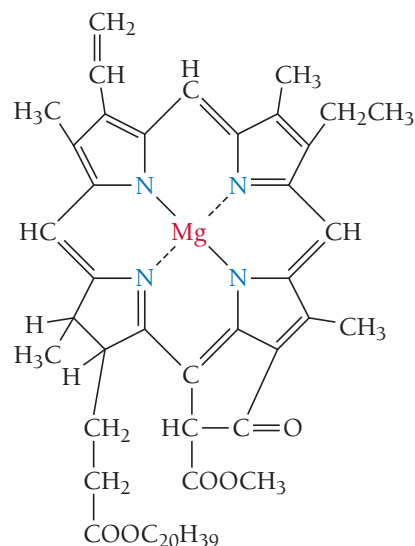
Chlorophyll Chlorophyll, shown in **Figure 22.22** ▶, is another porphyrin-based biomolecule, but in chlorophyll the porphyrin is not surrounded by a protein and the coordinated metal is magnesium (which is not a transition metal). Chlorophyll is essential for the *photosynthesis* process performed by plants, in which light energy from the sun is converted to chemical energy to fuel the plant's growth.

Carbonic Anhydrase In carbonic anhydrase, the zinc ion is bound in a tetrahedral complex, with three of the coordination sites occupied by nitrogen atoms from the surrounding protein and the fourth site available to bind a water molecule (**Figure 22.23** ▼). Carbonic anhydrase catalyzes the reaction between water and CO_2 in *respiration*, the process by which living organisms extract energy from glucose.

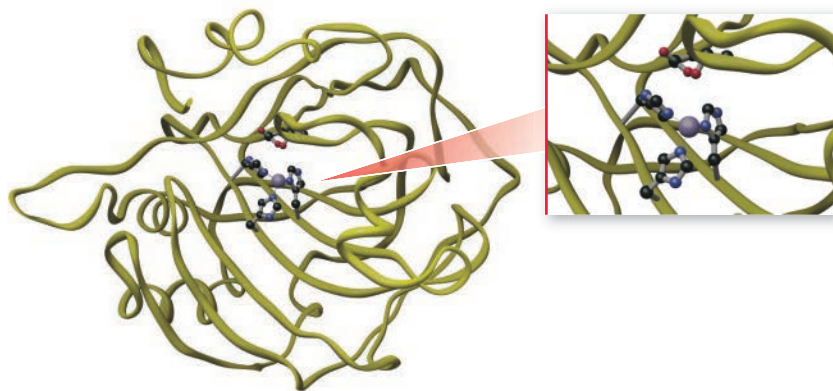


A water molecule alone is not acidic enough to react with a CO_2 molecule at a sufficient rate. When the water molecule is bound to the zinc ion in carbonic anhydrase, the positive charge on the metal draws electron density from the $O-H$ bond and the H_2O becomes more acidic—sufficiently so to readily lose a proton. The resulting bound OH^- easily reacts with a CO_2 molecule, and the reaction is much faster than the uncatalyzed version.

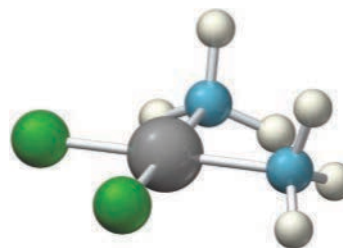
Drugs and Therapeutic Agents In the mid-1960s, researchers found that the platinum(II) complex *cis*- $[Pt(NH_3)_2Cl_2]$, known as cisplatin, is an effective anticancer agent (**Figure 22.24** ▼). Interestingly, the closely related geometric isomer *trans*- $[Pt(NH_3)_2Cl_2]$ has little or no effect on cancer tumors. Cisplatin is believed to function by attaching itself to the cancer cell's DNA and replacing the Cl^- ligands with donor atoms from the DNA strands. The *cis* arrangement of the Cl^- ligands corresponds to the geometry required to bind to the DNA strands. The *trans* isomer, though closely related, cannot bind properly due to the arrangement of the Cl^- ligands and is therefore not an effective agent. Cisplatin and other closely related platinum(II) complexes are used in chemotherapy for certain types of cancer and are among the most effective anticancer agents available for these cases.



▲ **FIGURE 22.22 Chlorophyll** Chlorophyll, involved in photosynthesis in plants, contains magnesium coordinated to a porphyrin.



▲ **FIGURE 22.23 Carbonic Anhydrase** Carbonic anhydrase contains a zinc ion that is bound in a tetrahedral complex, with three of the coordination sites occupied by nitrogen atoms from surrounding amino acids. The fourth site is available to bind a water molecule.



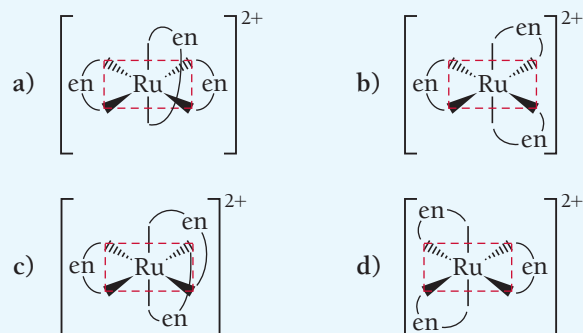
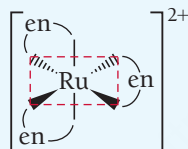
▲ **FIGURE 22.24 Cisplatin** Cisplatin is an effective anticancer agent.

SELF-ASSESSMENT

PEARSON
eText
2.0

QUIZ

- What is the electron configuration of the Cu^+ ion?
 - $[\text{Ar}]4s^23d^9$
 - $[\text{Ar}]4s^23d^8$
 - $[\text{Ar}]4s^13d^9$
 - $[\text{Ar}]4s^03d^{10}$
- Which metal has the highest first ionization energy?
 - Ti
 - Mn
 - Ru
 - Au
- What is the name of the compound $[\text{CoCl}(\text{NH}_3)_5]\text{Cl}_2$?
 - pentaamminetrichlorocobalt(III) chloride
 - pentaamminechlorocobalt(III) chloride
 - pentaamminechlorocobalt(II) chloride
 - pentaamminetrichlorocobalt(II) chloride
- What is the formula of hexaaquamanganese(II) sulfate?
 - $[\text{Mn}(\text{OH})_6]\text{SO}_4$
 - $[\text{Mn}(\text{H}_2\text{O})_6]\text{SO}_4$
 - $[\text{Mn}(\text{H}_2\text{O})_6]_2\text{SO}_4$
 - $[\text{Mn}_2(\text{H}_2\text{O})_6]_2\text{SO}_4$
- Which complex ion can exhibit geometric isomerism? Assume that M is the metal ion, A and B are ligands, and the geometry is octahedral.
 - $[\text{MA}_6]^{2+}$
 - $[\text{MA}_5\text{B}]^{2+}$
 - $[\text{MA}_4\text{B}_2]^{2+}$
 - $[\text{MAB}_5]^{2+}$
- Pick the optical isomer of the complex ion represented here.



- According to valence bond theory, what is the hybridization of the central metal ion in an octahedral complex ion?
 - sp
 - sp^3
 - dsp^2
 - d^2sp^3
- Estimate the crystal field splitting energy (in kJ/mol) for a complex ion that is red in solution.
 - 228 kJ/mol
 - 171 kJ/mol
 - 2.84×10^{-19} kJ/mol
 - 3.79×10^{-19} kJ/mol
- Use crystal field theory to determine the number of unpaired electrons in the complex ion $[\text{Fe}(\text{CN})_6]^{4-}$.
 - 0
 - 2
 - 3
 - 4
- Which complex ion is diamagnetic?
 - $[\text{Cr}(\text{H}_2\text{O})_4\text{Cl}_2]^+$
 - $[\text{Fe}(\text{H}_2\text{O})_6]^{2+}$
 - $[\text{Co}(\text{NH}_3)_6]^{3+}$
 - $[\text{CoCl}_6]^{3-}$

Answers: 1. d; 2. d; 3. b; 4. b; 5. c; 6. b; 7. d; 8. a; 9. a; 10. c

CHAPTER SUMMARY 22
REVIEW

MasteringChemistry™ provides end-of-chapter exercises, feedback-enriched tutorial problems, animations, and interactive activities to encourage problem solving practice and deeper understanding of key concepts and topics.

KEY LEARNING OUTCOMES

CHAPTER OBJECTIVES	ASSESSMENT
Write Electronic Configurations for Transition Metals and Their Ions (22.2)	• Examples 22.1, 22.2 For Practice 22.1, 22.2 Exercises 19–20, 57, 58
Name Coordination Compounds (22.3)	• Examples 22.3, 22.4 For Practice 22.3, 22.4 Exercises 23–28
Identify and Draw Geometric Isomers (22.4)	• Examples 22.5, 22.6 For Practice 22.5, 22.6 Exercises 5–40, 61–62
Recognize and Draw Optical Isomers (22.4)	• Example 22.7 For Practice 22.7 Exercises 39–40, 61–62
Estimate Crystal Field Splitting Energy (22.5)	• Example 22.8 For Practice 22.8 Exercises 43–46
Determine the Number of Unpaired Electrons in Octahedral Complexes (22.5)	• Examples 22.9, 22.10 For Practice 22.9, 22.10 Exercises 49–52, 65

KEY TERMS

Section 22.1

crystal field theory (986)

Section 22.2

lanthanide contraction (988)

Section 22.3

complex ion (990)

ligand (990)

coordination compound (990)

primary valence (990)

secondary valence (990)

coordination number (secondary valence) (990)

coordinate covalent bond (990)

monodentate (990)

bidentate (990)

polydentate (991)

chelate (991)

chelating agent (991)

Section 22.4

structural isomers (995)

stereoisomers (995)

coordination isomers (995)

linkage isomers (995)

geometric isomers (996)

optical isomers (998)

Section 22.5

strong-field complex (1001)

weak-field complex (1001)

low-spin complex (1003)

high-spin complex (1003)

KEY CONCEPTS

Electron Configurations (22.2)

- As we move across a row of transition elements, we add electrons to the $(n - 1)d$ orbitals, resulting in a general electron configuration for first- and second-row transition elements of [noble gas] $ns^2(n - 1)d^x$ and for the third and fourth rows of [noble gas] $ns^2(n - 2)f^{14}(n - 1)d^x$, where x ranges from 1 to 10.
- A transition element forms a cation by losing electrons from the ns orbitals before losing electrons from the $(n - 1)d$ orbitals.

Periodic Trends (22.2)

- The variations in atomic size, ionization energy, and electronegativity across a row in the periodic table for transition metals are similar to those of main-group elements (although the trends are less pronounced and less regular). As we move down a group, however, atomic size increases from the first row of transition metals to the second but stays roughly constant from the second row to the third because of the lanthanide contraction. This contraction results in ionization energy and electronegativity trends as we move down a column for transition metals that are opposite of the main-group elements.

Composition and Naming of Coordination Compounds (22.3)

- A coordination compound is composed of a complex ion and a counterion.
- A complex ion contains a central metal ion bound to one or more ligands. The number of ligands directly bound to the metal ion is called the coordination number.
- The ligand forms a coordinate covalent bond to the metal ion by donating a pair of electrons to an empty orbital on the metal.
- Ligands that donate a single pair of electrons are monodentate. A ligand that donates two pairs of electrons is bidentate, and a ligand that donates more than two pairs is polydentate.

- In naming coordination compounds, we use the name of the cation followed by the name of the anion. To name a complex ion, we use the guidelines outlined in Section 22.3.

Types of Isomers (22.4)

- We broadly divide the isomerism observed in coordination compounds into two categories: structural isomers, in which atoms are connected differently to one another, and stereoisomers, in which atoms are connected in the same way but the ligands have a different spatial arrangement about the metal atom.
- Structural isomers are either coordination isomers (a coordinated ligand exchanges places with an uncoordinated counterion) or linkage isomers (a particular ligand has the ability to coordinate to the metal in different ways).
- Stereoisomers are either geometric isomers (the ligands bonded to the metal have a different spatial arrangement relative to each other, leading to cis-trans or fac-mer isomers) or optical isomers (nonsuperimposable mirror images of one another).

Bonding in Coordination Compounds (22.5)

- Crystal field theory is a bonding model for transition metal complex ions. The model describes how the degeneracy of the d orbitals is broken by the repulsive forces between the electrons on the ligands around the metal ion and the d orbitals in the metal ion.
- The energy difference between the split d orbitals is the crystal field splitting energy (Δ). The magnitude of Δ depends in large part on the ligands bound to the metal.
- Octahedral complexes with a d^4 , d^5 , d^6 , or d^7 metal ion can have two possible electronic configurations with different numbers of unpaired electrons. The first, called high-spin, has the same number of unpaired electrons as the free metal ion and is usually the result of a weak crystal field. The second, called low-spin, has fewer unpaired electrons than the free metal ion and is usually the result of a strong crystal field.

KEY EQUATIONS AND RELATIONSHIPS

Crystal Field Splitting Energy (22.5)

$$\Delta = hc/\lambda \text{ (where } \lambda \text{ is the wavelength of maximum absorption)}$$

EXERCISES

REVIEW QUESTIONS

- When a transition metal atom forms an ion, which electrons are lost first?
- Explain why transition metals exhibit multiple oxidation states instead of a single oxidation state (which most of the main-group metals do).
- Why is the +2 oxidation state so common for transition metals?
- Explain why atomic radii of elements in the third row of the transition metals are no larger than those of elements in the second row.
- Gold is the most electronegative transition metal. Explain.
- Briefly define each term.
 - coordination number
 - ligand
 - bidentate and polydentate
 - complex ion
 - chelating agent
- Using the Lewis acid–base definition, how would you categorize a ligand? How would you categorize a transition metal ion?
- Explain the differences between each pair of isomer types.
 - structural isomer and stereoisomer
 - linkage isomer and coordination isomer
 - geometric isomer and optical isomer
- Which complex ion geometry has the potential to exhibit cis–trans isomerism: linear, tetrahedral, square planar, octahedral?
- How can you tell whether a complex ion is optically active?
- Explain the differences between weak-field and strong-field metal complexes.
- Explain why compounds of Sc^{3+} are colorless, but compounds of Ti^{3+} are colored.
- Explain why compounds of Zn^{2+} are white, but compounds of Cu^{2+} are often blue or green.
- Explain the differences between high-spin and low-spin metal complexes.
- Why are almost all tetrahedral complexes high-spin?
- Many transition metal compounds are colored. How does crystal field theory account for this?

PROBLEMS BY TOPIC

Note: Answers to all odd-numbered Problems, numbered in blue, can be found in Appendix III. Exercises in the Problems by Topic section are paired, with each odd-numbered problem followed by a similar even-numbered problem. Exercises in the Cumulative Problems section are also paired but more loosely. Because of their nature, Challenge Problems and Conceptual Problems are unpaired.

Properties of Transition Metals

- Write the ground state electron configuration for each atom and ion pair.
 - Ni, Ni^{2+}
 - Mn, Mn^{4+}
 - Y, Y^{+}
 - Ta, Ta^{2+}
- Write the ground state electron configuration for each atom and ion pair.
 - Zr, Zr^{2+}
 - Co, Co^{2+}
 - Tc, Tc^{3+}
 - Os, Os^{4+}
- Determine the highest possible oxidation state for each element.
 - V
 - Re
 - Pd
- Which first-row transition metal(s) has the following highest possible oxidation state?
 - +3
 - +7
 - +4

Coordination Compounds

- Determine the oxidation state and coordination number of the metal ion in each complex ion.
 - $[\text{Cr}(\text{H}_2\text{O})_6]^{3+}$
 - $[\text{Co}(\text{NH}_3)_3\text{Cl}_3]^{-}$
 - $[\text{Cu}(\text{CN})_4]^{2-}$
 - $[\text{Ag}(\text{NH}_3)_2]^{+}$
- Determine the oxidation state and coordination number of the metal ion in each complex ion.
 - $[\text{Co}(\text{NH}_3)_5\text{Br}]^{2+}$
 - $[\text{Fe}(\text{CN})_6]^{4-}$
 - $[\text{Co}(\text{ox})_3]^{4-}$
 - $[\text{PdCl}_4]^{2-}$
- Name each complex ion or coordination compound.
 - $[\text{Cr}(\text{H}_2\text{O})_6]^{3+}$
 - $[\text{Cu}(\text{CN})_4]^{2-}$
 - $[\text{Fe}(\text{NH}_3)_5\text{Br}]\text{SO}_4$
 - $[\text{Co}(\text{H}_2\text{O})_4(\text{NH}_3)(\text{OH})]\text{Cl}_2$

- Name each complex ion or coordination compound.
 - $[\text{Cu}(\text{en})_2]^{2+}$
 - $[\text{Mn}(\text{CO})_3(\text{NO}_2)_3]^{2+}$
 - $\text{Na}[\text{Cr}(\text{H}_2\text{O})_2(\text{ox})_2]$
 - $[\text{Co}(\text{en})_3][\text{Fe}(\text{CN})_6]$
- Write the formula for each complex ion or coordination compound.
 - hexaamminechromium(III)
 - potassium hexacyanoferrate(III)
 - ethylenediaminedithiocyanatocopper(II)
 - tetraaquaplatinum(II) hexachloroplatinate(IV)
- Write the formula for each complex ion or coordination compound.
 - hexaaquanickel(II) chloride
 - pentacarbonylchloromanganese(I)
 - ammonium diaquatetrabromovanadate(III)
 - tris(ethylenediamine)cobalt(III) trioxalatoferrate(III)
- Write the formula and the name of each complex ion.
 - a complex ion with Co^{3+} as the central ion and three NH_3 molecules and three CN^{-} ions as ligands
 - a complex ion with Cr^{3+} as the central ion and a coordination number of 6 with ethylenediamine ligands
- Write the formula and the name of each complex ion or coordination compound.
 - a complex ion with four water molecules and two ONO^{-} ions connected to an iron(III) ion
 - a coordination compound made of two complex ions: one a complex of vanadium(III) with two ethylenediamine molecules and two Cl^{-} ions as ligands and the other a complex of nickel(II) having a coordination number of 4 with Cl^{-} ions as ligands

Structure and Isomerism

- Draw two linkage isomers of $[\text{Mn}(\text{NH}_3)_5(\text{NO}_2)]^{2+}$.
- Draw two linkage isomers of $[\text{PtCl}_3(\text{SCN})]^{2-}$.

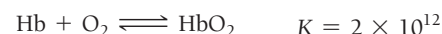
31. Write the formulas and names for the coordination isomers of $[\text{Fe}(\text{H}_2\text{O})_6]\text{Cl}_2$.
32. Write the formulas and names for the coordination isomers of $[\text{Co}(\text{en})_3][\text{Cr}(\text{ox})_3]$.
33. Which complexes exhibit geometric isomerism?
 - a. $[\text{Cr}(\text{NH}_3)_5(\text{OH})]^{2+}$
 - b. $[\text{Cr}(\text{en})_2\text{Cl}_2]^+$
 - c. $[\text{Cr}(\text{H}_2\text{O})(\text{NH}_3)_3\text{Cl}_2]^+$
 - d. $[\text{Pt}(\text{NH}_3)\text{Cl}_3]^-$
 - e. $[\text{Pt}(\text{H}_2\text{O})_2(\text{CN})_2]$
34. Which complexes exhibit geometric isomerism?
 - a. $[\text{Co}(\text{H}_2\text{O})_2(\text{ox})_2]^-$
 - b. $[\text{Co}(\text{en})_3]^{3+}$
 - c. $[\text{Co}(\text{H}_2\text{O})_2(\text{NH}_3)_2(\text{ox})]^+$
 - d. $[\text{Ni}(\text{NH}_3)_2(\text{en})]^{2+}$
 - e. $[\text{Ni}(\text{CO})_2\text{Cl}_2]$
35. If W, X, Y, and Z are different monodentate ligands, how many geometric isomers are there for each ion?
 - a. square planar $[\text{NiWXYZ}]^{2+}$
 - b. tetrahedral $[\text{ZnWXYZ}]^{2+}$
36. How many geometric isomers are there for each species?
 - a. $[\text{Fe}(\text{CO})_3\text{Cl}_3]$
 - b. $[\text{Mn}(\text{CO})_2\text{Cl}_2\text{Br}_2]^+$
37. Draw the structures and label the type for all the isomers of each ion.
 - a. $[\text{Cr}(\text{CO})_3(\text{NH}_3)_3]^{3+}$
 - b. $[\text{Pd}(\text{CO})_2(\text{H}_2\text{O})\text{Cl}]^+$
38. Draw the structures and label the type for all the isomers of each species.
 - a. $[\text{Fe}(\text{CO})_4\text{Cl}_2]^+$
 - b. $[\text{Pt}(\text{en})\text{Cl}_2]$
39. Determine if either isomer of $[\text{Cr}(\text{NH}_3)_2(\text{ox})_2]^-$ is optically active.
40. Determine if either isomer of $[\text{Fe}(\text{CO})_3\text{Cl}_3]$ is optically active.
46. Three bottles of aqueous solutions are discovered in an abandoned lab. The solutions are green, yellow, and purple. It is known that three complex ions of chromium(III) were commonly used in that lab: $[\text{Cr}(\text{H}_2\text{O})_6]^{3+}$, $[\text{Cr}(\text{NH}_3)_6]^{3+}$, and $[\text{Cr}(\text{H}_2\text{O})_4\text{Cl}_2]^+$. Determine the likely identity of each of the colored solutions.
47. The $[\text{Mn}(\text{NH}_3)_6]^{2+}$ ion is paramagnetic with five unpaired electrons. The NH_3 ligand is usually a strong-field ligand. Is NH_3 acting as a strong-field in this case?
48. The complex $[\text{Fe}(\text{H}_2\text{O})_6]^{2+}$ is paramagnetic. Is the H_2O ligand inducing a strong or weak field?
49. How many unpaired electrons do you expect each complex ion to have?
 - a. $[\text{RhCl}_6]^{3-}$
 - b. $[\text{Co}(\text{OH})_6]^{4-}$
 - c. $\text{cis-}[\text{Fe}(\text{en})_2(\text{NO}_2)_2]^+$
50. How many unpaired electrons do you expect each complex ion to have?
 - a. $[\text{Cr}(\text{CN})_6]^{4-}$
 - b. $[\text{MnF}_6]^{4-}$
 - c. $[\text{Ru}(\text{en})_3]^{2+}$
51. How many unpaired electrons do you expect the complex ion $[\text{CoCl}_4]^{2-}$ to have if it is a tetrahedral shape?
52. The complex ion $[\text{PdCl}_4]^{2-}$ is known to be diamagnetic. Use this information to determine if it is a tetrahedral or square planar structure.

Bonding in Coordination Compounds

41. Draw the octahedral crystal field splitting diagram for each metal ion.
 - a. Zn^{2+}
 - b. Fe^{3+} (high- and low-spin)
 - c. V^{3+}
 - d. Co^{2+} (high-spin)
42. Draw the octahedral crystal field splitting diagram for each metal ion.
 - a. Cr^{3+}
 - b. Cu^{2+}
 - c. Mn^{3+} (high- and low-spin)
 - d. Fe^{2+} (low-spin)
43. The $[\text{CrCl}_6]^{3-}$ ion has a maximum absorbance in its absorption spectrum at 735 nm. Calculate the crystal field splitting energy (in kJ/mol) for this ion.
44. The absorption spectrum of the complex ion $[\text{Rh}(\text{NH}_3)_6]^{3+}$ has maximum absorbance at 295 nm. Calculate the crystal field splitting energy (in kJ/mol) for this ion.
45. Three complex ions of cobalt(III), $[\text{Co}(\text{CN})_6]^{3-}$, $[\text{Co}(\text{NH}_3)_6]^{3+}$, and $[\text{CoF}_6]^{3-}$, absorb light at wavelengths of (in no particular order) 290 nm, 440 nm, and 770 nm. Match each complex ion to the appropriate wavelength absorbed. What color would you expect each solution to be?

Applications of Coordination Compounds

53. What structural feature do hemoglobin, cytochrome c, and chlorophyll have in common?
54. Identify the central metal atom in each complex.
 - a. hemoglobin
 - b. carbonic anhydrase
 - c. chlorophyll
 - d. iron blue
55. Hemoglobin exists in two predominant forms in our bodies. One form, known as oxyhemoglobin, has O_2 bound to the iron and the other, known as deoxyhemoglobin, has a water molecule bound instead. Oxyhemoglobin is a low-spin complex that gives arterial blood its red color, and deoxyhemoglobin is a high-spin complex that gives venous blood its darker color. Explain these observations in terms of crystal field splitting. Would you categorize O_2 as a strong- or weak-field ligand?
56. Carbon monoxide and the cyanide ion are both toxic because they bind more strongly than oxygen to the iron in hemoglobin (Hb).



Calculate the equilibrium constant value for this reaction.



Does the equilibrium favor reactants or products?

CUMULATIVE PROBLEMS

57. Recall from Chapter 3 that Cr and Cu are exceptions to the normal orbital filling, resulting in a $[\text{Ar}]4s^13d^x$ configuration. Write the ground state electron configuration for each species.
 - a. Cr, Cr^+ , Cr^{2+} , Cr^{3+}
 - b. Cu, Cu^+ , Cu^{2+}
58. Most of the second-row transition metals do not follow the normal orbital filling pattern. Five of them—Nb, Mo, Ru, Rh, and Ag—have a $[\text{Kr}]5s^14d^x$ configuration and Pd has a $[\text{Kr}]4d^{10}$ configuration. Write the ground state electron configuration for each species.
 - a. Mo, Mo^+ , Ag, Ag^+
 - b. Ru, Ru^{3+}
 - c. Rh, Rh^{2+}
 - d. Pd, Pd^+ , Pd^{2+}

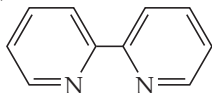
59. Draw the Lewis diagrams for each ligand. Indicate the lone pair(s) that may be donated to the metal. Indicate any you expect to be bidentate or polydentate.

a. NH_3 b. SCN^- c. H_2O

60. Draw the Lewis diagrams for each ligand. Indicate the lone pair(s) that may be donated to the metal. Indicate any you expect to be bidentate or polydentate.

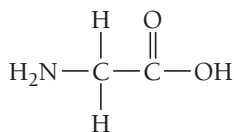
a. CN^-

b. bipyridyl (bipy), which has the following structure:



c. NO_2^-

61. List all the different formulas for an octahedral complex made from a metal (M) and three different ligands (A, B, and C). Describe any isomers for each complex.
62. Amino acids, such as glycine (gly), form complexes with the trace metal ions found in the bloodstream. Glycine, whose structure is shown here, acts as a bidentate ligand coordinating with the nitrogen atom and one of the oxygen atoms.



Draw all the possible isomers of:

- a. square planar $[\text{Ni}(\text{gly})_2]$ b. tetrahedral $[\text{Zn}(\text{gly})_2]$
c. octahedral $[\text{Fe}(\text{gly})_3]$

63. Oxalic acid solutions remove rust stains. Draw a complex ion that is likely responsible for this effect. Does it have any isomers?
64. W, X, Y, and Z are different monodentate ligands.
a. Is the square planar $[\text{NiWXYZ}]^{2+}$ optically active?
b. Is the tetrahedral $[\text{ZnWXYZ}]^{2+}$ optically active?
65. Hexacyanomanganate(III) ion is a low-spin complex. Draw the crystal field splitting diagram with electrons filled in appropriately. Is this complex paramagnetic or diamagnetic?
66. Determine the color and approximate wavelength absorbed most strongly by each solution.
a. blue solution
b. red solution
c. yellow solution
67. Draw the structures of all the geometric isomers of $[\text{Ru}(\text{H}_2\text{O})_2(\text{NH}_3)_2\text{Cl}_2]^+$. Draw the mirror images of any that are chiral.
68. A 0.32 mol amount of NH_3 is dissolved in 0.47 L of a 0.38 M silver nitrate solution. Calculate the equilibrium concentrations of all species in the solution.

CHALLENGE PROBLEMS

69. When a solution of PtCl_2 reacts with the ligand trimethylphosphine, $\text{P}(\text{CH}_3)_3$, two compounds are produced. The compounds share the same elemental analysis: 46.7% Pt; 17.0% Cl; 14.8% P; 17.2% C; 4.34% H. Determine the formula, draw the structure, and give the systematic name for each compound.
70. Draw a crystal field splitting diagram for a trigonal planar complex ion. Assume the plane of the molecule is perpendicular to the z axis.
71. Draw a crystal field splitting diagram for a trigonal bipyramidal complex ion. Assume the axial positions are on the z axis.
72. Explain why $[\text{Ni}(\text{NH}_3)_4]^{2+}$ is paramagnetic, while $[\text{Ni}(\text{CN})_4]^{2-}$ is diamagnetic.
73. Sulfide (S^{2-}) salts are notoriously insoluble in aqueous solution.
a. Calculate the molar solubility of nickel(II) sulfide in water.
 $K_{\text{sp}}(\text{NiS}) = 3 \times 10^{-16}$
b. Nickel(II) ions form a complex ion in the presence of ammonia with a formation constant (K_f) of 2.0×10^8 :
 $\text{Ni}^{2+} + 6 \text{NH}_3 \rightleftharpoons [\text{Ni}(\text{NH}_3)_6]^{2+}$. Calculate the molar solubility of NiS in 3.0 M NH_3 .
c. Explain any differences between the answers to parts a and b.
74. Calculate the solubility of $\text{Zn}(\text{OH})_2(\text{s})$ in 2.0 M NaOH solution. (Hint: You must take into account the formation of $\text{Zn}(\text{OH})_4^{2-}$, which has a $K_f = 2 \times 10^{15}$.)
75. Halide complexes of metal M of the form $[\text{MX}_6]^{3-}$ are found to be stable in aqueous solution. But it is possible that they undergo rapid ligand exchange with water (or other ligands) that is not detectable because the complexes are less stable. This property is referred to as their *lability*. Suggest an experiment to measure the lability of these complexes that does not employ radioactive labels.
76. The K_f for $[\text{Cu}(\text{en})_2]^{2+}$ is much larger than the one for $[\text{Cu}(\text{NH}_3)_4]^{2+}$. This difference is primarily an entropy effect. Explain why and calculate the difference between the ΔS° values at 298 K for the complete dissociation of the two complex ions. (Hint: The value of ΔH is about the same for both systems.)
77. When solid $\text{Cd}(\text{OH})_2$ is added to a solution of 0.10 M NaI, some of it dissolves. Calculate the pH of the solution at equilibrium.

CONCEPTUAL PROBLEMS

78. Two ligands, A and B, both form complexes with a particular metal ion. When the metal ion complexes with ligand A, the solution is green. When the metal ion complexes with ligand B, the solution is violet. Which of the two ligands results in the larger Δ ?
79. Which element has the higher first ionization energy, Cu or Au?
80. The complexes of Fe^{3+} have magnetic properties that depend on whether the ligands are strong or weak field. Explain why this observation supports the idea that electrons are lost from the 4s orbital before the 3d orbitals in the transition metals.

QUESTIONS FOR GROUP WORK

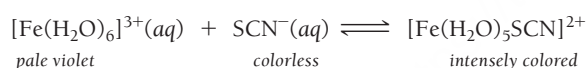
Active Classroom Learning

Discuss these questions with the group and record your consensus answer.

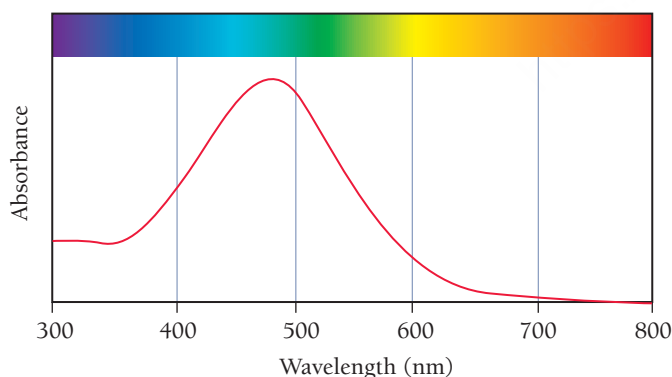
81. Have each group member choose a row of the transition metals in the periodic table and ask each to look up and graph (where appropriate) a trend, choosing from the following: electron configuration, atomic size, ionization energy, or electronegativity. Present your graph to the group. Describe the general trend and any notable exceptions. If possible, form new groups with individuals who researched the same property for a different row of the periodic table.
82. Have each group member write down the names and formulas for two coordination compounds. Taking turns, show the formula to the group, and have the rest of the group members name the compound, with each member contributing one step in the process. Once each group member has had his or her formula named, repeat the process by showing only names to the group and having group members determine the correct formula.
83. Working individually, draw a pair of coordination compounds that are isomers. Take turns showing your drawings to the group and having them identify the type of isomerism and the reasons that your drawing demonstrates that type of isomerism. If your group misidentifies your type of isomerism, rather than telling them the correct answer right away, point out the part of the structure that prevents it from being the type of isomerism they identified.
84. Divide the electron configurations d^1 through d^{10} among the group members such that every configuration is assigned to at least two group members. Working individually, draw the orbital diagram for the configurations assigned to you, including both high-spin and low-spin diagrams where possible. Present your diagrams to your group. Combine all diagrams into one set for the group.
85. Working individually, review one of the applications of coordination complexes. Without you or your group members referring to the text, describe the application you reviewed without mentioning the key words in the heading of the subsection. As each group member describes the application they reviewed, take turns attempting to identify the key words from the heading of the subsection they are describing.

DATA INTERPRETATION AND ANALYSIS

86. Many aqueous solutions of complex ions display brilliant colors that depend on the identities of the metal ion and ligand(s). Some ligands bind selectively to certain metal ions and produce a complex ion with characteristic colors. These distinctive complex ions serve as qualitative indicators of the presence of particular metal ions. For example, Fe^{3+} is identified by the rapid formation of the intensely colored pentaquathiocyanatoiron(III) complex ion, $[\text{Fe}(\text{H}_2\text{O})_5\text{SCN}]^{2+}$, when thiocyanate, SCN^- , is added to a solution containing hexaaquairon(III), $[\text{Fe}(\text{H}_2\text{O})_6]^{3+}$, according to the balanced chemical equation shown here:



Examine the absorption spectrum of an aqueous solution of $[\text{Fe}(\text{H}_2\text{O})_5\text{SCN}]^{2+}$ shown here and answer the questions.



◀ Absorption Spectrum of $[\text{Fe}(\text{H}_2\text{O})_5\text{SCN}]^{2+}$

ANSWERS TO CONCEPTUAL CONNECTIONS

- Cc 22.1 The element W has the larger radius because it is in the third transition row and Fe is in the first. Atomic radii increase from the first to the second transition row and stay roughly constant from the second to the third.
- Cc 22.2 Ligand B forms a yellow solution, which means that the complex absorbs in the violet region. Ligand A forms a red

solution, which means that the complex absorbs in the green. Since the violet region of the electromagnetic spectrum is of shorter wavelength (higher energy) than the green region, ligand B produces a higher Δ .

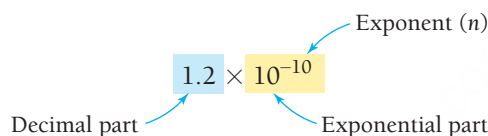
This page intentionally left blank

APPENDIX I

Common Mathematical Operations in Chemistry

A. Scientific Notation

A number written in scientific notation consists of a **decimal part**, a number that is usually between 1 and 10, and an **exponential part**, 10 raised to an **exponent**, n .



The diagram shows the expression 1.2×10^{-10} . The number 1.2 is highlighted in a light blue box and labeled "Decimal part" with a blue arrow. The 10^{-10} is highlighted in a light yellow box and labeled "Exponential part" with a blue arrow. The superscript -10 is labeled "Exponent (n)" with a blue arrow.

Each of the following numbers is written in both scientific and decimal notation:

$$1.0 \times 10^5 = 100,000 \quad 1.0 \times 10^{-6} = 0.000001$$

$$6.7 \times 10^3 = 6700 \quad 6.7 \times 10^{-3} = 0.0067$$

A positive exponent means 1 multiplied by 10 n times.

$$10^0 = 1$$

$$10^1 = 1 \times 10$$

$$10^2 = 1 \times 10 \times 10 = 100$$

$$10^3 = 1 \times 10 \times 10 \times 10 = 1000$$

A negative exponent ($-n$) means 1 divided by 10 n times.

$$10^{-1} = \frac{1}{10} = 0.1$$

$$10^{-2} = \frac{1}{10 \times 10} = 0.01$$

$$10^{-3} = \frac{1}{10 \times 10 \times 10} = 0.001$$

To convert a number to scientific notation, we move the decimal point to obtain a number between 1 and 10 and then multiply by 10 raised to the appropriate power. For example, to write 5983 in scientific notation, we move the decimal point to the left three places to get 5.983 (a number between 1 and 10) and then multiply by 1000 to make up for moving the decimal point.

$$5983 = 5.983 \times 1000$$

Since 1000 is 10^3 , we write:

$$5983 = 5.983 \times 10^3$$

We can do this in one step by counting how many places we move the decimal point to obtain a number between 1 and 10 and then writing the decimal part multiplied by 10 raised to the number of places we moved the decimal point.

$$5983 = 5.983 \times 10^3$$

If the decimal point is moved to the left, as in the previous example, the exponent is positive. If the decimal is moved to the right, the exponent is negative.

$$0.00034 = 3.4 \times 10^{-4}$$

To express a number in scientific notation:

1. Move the decimal point to obtain a number between 1 and 10.
2. Write the result from step 1 multiplied by 10 raised to the number of places you moved the decimal point.
 - The exponent is positive if you moved the decimal point to the left.
 - The exponent is negative if you moved the decimal point to the right.

Consider the following additional examples:

$$290,809,000 = 2.90809 \times 10^8$$

$$0.000000000070 \text{ m} = 7.0 \times 10^{-11} \text{ m}$$

Multiplication and Division

To multiply numbers expressed in scientific notation, multiply the decimal parts and add the exponents.

$$(A \times 10^m)(B \times 10^n) = (A \times B) \times 10^{m+n}$$

To divide numbers expressed in scientific notation, divide the decimal parts and subtract the exponent in the denominator from the exponent in the numerator.

$$\frac{(A \times 10^m)}{(B \times 10^n)} = \left(\frac{A}{B}\right) \times 10^{m-n}$$

Consider the following example involving multiplication:

$$\begin{aligned}(3.5 \times 10^4)(1.8 \times 10^6) &= (3.5 \times 1.8) \times 10^{4+6} \\ &= 6.3 \times 10^{10}\end{aligned}$$

Consider the following example involving division:

$$\begin{aligned}\frac{(5.6 \times 10^7)}{(1.4 \times 10^3)} &= \left(\frac{5.6}{1.4}\right) \times 10^{7-3} \\ &= 4.0 \times 10^4\end{aligned}$$

Addition and Subtraction

To add or subtract numbers expressed in scientific notation, rewrite all the numbers so that they have the same exponent, then add or subtract the decimal parts of the numbers. The exponents remained unchanged.

$$\begin{array}{r} A \times 10^n \\ \pm B \times 10^n \\ \hline (A \pm B) \times 10^n \end{array}$$

Notice that the numbers *must have* the same exponent. Consider the following example involving addition:

$$\begin{array}{r} 4.82 \times 10^7 \\ + 3.4 \times 10^6 \\ \hline \end{array}$$

First, express both numbers with the same exponent. In this case, we rewrite the lower number and perform the addition as follows:

$$\begin{array}{r} 4.82 \times 10^7 \\ +0.34 \times 10^7 \\ \hline 5.16 \times 10^7 \end{array}$$

Consider the following example involving subtraction:

$$\begin{array}{r} 7.33 \times 10^5 \\ -1.9 \times 10^4 \\ \hline \end{array}$$

First, express both numbers with the same exponent. In this case, we rewrite the lower number and perform the subtraction as follows:

$$\begin{array}{r} 7.33 \times 10^5 \\ -0.19 \times 10^5 \\ \hline 7.14 \times 10^5 \end{array}$$

Powers and Roots

To raise a number written in scientific notation to a power, raise the decimal part to the power and multiply the exponent by the power:

$$\begin{aligned} (4.0 \times 10^6)^2 &= 4.0^2 \times 10^{6 \times 2} \\ &= 16 \times 10^{12} \\ &= 1.6 \times 10^{13} \end{aligned}$$

To take the n th root of a number written in scientific notation, take the n th root of the decimal part and divide the exponent by the root:

$$\begin{aligned} (4.0 \times 10^6)^{1/3} &= 4.0^{1/3} \times 10^{6/3} \\ &= 1.6 \times 10^2 \end{aligned}$$

B. Logarithms

Common (or Base 10) Logarithms

The common or base 10 logarithm (abbreviated log) of a number is the exponent to which 10 must be raised to obtain that number. For example, the log of 100 is 2 because 10 must be raised to the second power to get 100. Similarly, the log of 1000 is 3 because 10 must be raised to the third power to get 1000. The logs of several multiples of 10 are shown below:

$$\begin{aligned} \log 10 &= 1 \\ \log 100 &= 2 \\ \log 1000 &= 3 \\ \log 10,000 &= 4 \end{aligned}$$

Because $10^0 = 1$ by definition, $\log 1 = 0$.

The log of a number smaller than one is negative because 10 must be raised to a negative exponent to get a number smaller than one. For example, the log of 0.01 is -2 because 10 must be raised to -2 to get 0.01. Similarly, the log of 0.001 is -3 because 10 must be raised to -3 to get 0.001. The logs of several fractional numbers are shown below:

$$\begin{aligned} \log 0.1 &= -1 \\ \log 0.01 &= -2 \end{aligned}$$

$$\log 0.001 = -3$$

$$\log 0.0001 = -4$$

The logs of numbers that are not multiples of 10 can be computed on your calculator. See your calculator manual for specific instructions.

Inverse Logarithms

The inverse logarithm or invlog function is exactly the opposite of the log function. For example, the log of 100 is 2 and the inverse log of 2 is 100. The log function and the invlog function undo one another.

$$\log 100 = 2$$

$$\text{invlog } 2 = 100$$

$$\text{invlog}(\log 100) = 100$$

The inverse log of a number is 10 raised to that number.

$$\text{invlog } x = 10^x$$

$$\text{invlog } 3 = 10^3 = 1000$$

The inverse logs of numbers can be computed on your calculator. See your calculator manual for specific instructions.

Natural (or Base e) Logarithms

The natural (or base e) logarithm (abbreviated \ln) of a number is the exponent to which e (which has the value of 2.71828...) must be raised to obtain that number. For example, the \ln of 100 is 4.605 because e must be raised to 4.605 to get 100. Similarly, the \ln of 10.0 is 2.303 because e must be raised to 2.303 to get 10.0.

The inverse natural logarithm or invln function is exactly the opposite of the \ln function. For example, the \ln of 100 is 4.605 and the inverse \ln of 4.605 is 100. The inverse \ln of a number is simply e raised to that number.

$$\text{invln } x = e^x$$

$$\text{invln } 3 = e^3 = 20.1$$

The invln of a number can be computed on your calculator. See your calculator manual for specific instructions.

Mathematical Operations Using Logarithms

Because logarithms are exponents, mathematical operations involving logarithms are similar to those involving exponents as follows:

$$\log(a \times b) = \log a + \log b \quad \ln(a \times b) = \ln a + \ln b$$

$$\log \frac{a}{b} = \log a - \log b \quad \ln \frac{a}{b} = \ln a - \ln b$$

$$\log a^n = n \log a \quad \ln a^n = n \ln a$$

C. Quadratic Equations

A quadratic equation contains at least one term in which the variable x is raised to the second power (and no terms in which x is raised to a higher power). A quadratic equation has the following general form:

$$ax^2 + bx + c = 0$$

A quadratic equation can be solved for x using the quadratic formula:

$$x = \frac{-b \pm \sqrt{b^2 - 4ac}}{2a}$$

Quadratic equations are often encountered when solving equilibrium problems. Below we show how to use the quadratic formula to solve a quadratic equation for x .

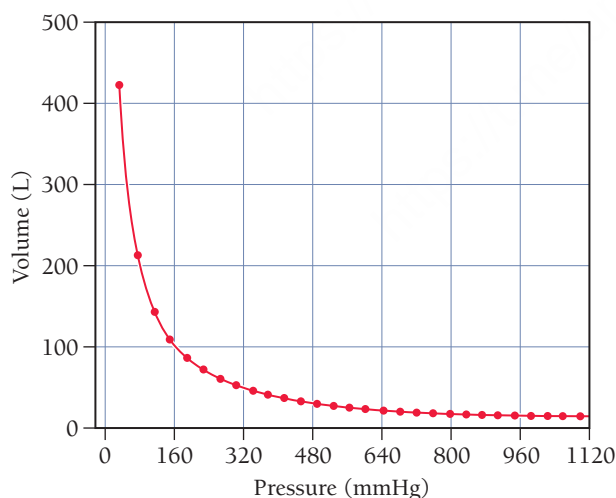
$$3x^2 - 5x + 1 = 0 \quad (\text{quadratic equation})$$

$$\begin{aligned} x &= \frac{-b \pm \sqrt{b^2 - 4ac}}{2a} \\ &= \frac{-(-5) \pm \sqrt{(-5)^2 - 4(3)(1)}}{2(3)} \\ &= \frac{5 \pm 3.6}{6} \\ x &= 1.43 \quad \text{or} \quad x = 0.233 \end{aligned}$$

As you can see, the solution to a quadratic equation usually has two values. In any real chemical system, one of the values can be eliminated because it has no physical significance. (For example, it may correspond to a negative concentration, which does not exist.)

D. Graphs

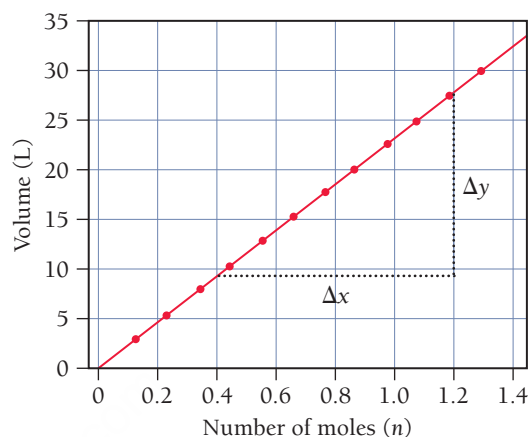
Graphs are often used to visually show the relationship between two variables. For example, in Chapter 11 we show the following relationship between the volume of a gas and its pressure:



◀ **Volume versus Pressure** A plot of the volume of a gas sample—as measured in a J-tube—versus pressure. The plot shows that volume and pressure are inversely related.

The horizontal axis is the x -axis and is normally used to show the independent variable. The vertical axis is the y -axis and is normally used to show how the other variable (called the dependent variable) varies with a change in the independent variable. In this case, the graph shows that as the pressure of a gas sample increases, its volume decreases.

Many relationships in chemistry are *linear*, which means that if you change one variable by a factor of n the other variable will also change by a factor of n . For example, the volume of a gas is linearly related to the number of moles of gas. When two quantities are linearly related, a graph of one versus the other produces a straight line. For example, the graph below shows how the volume of an ideal gas sample depends on the number of moles of gas in the sample:



► **Volume versus Number of Moles**

The volume of a gas sample increases linearly with the number of moles of gas in the sample.

A linear relationship between any two variables x and y can be expressed by the following equation:

$$y = mx + b$$

where m is the slope of the line and b is the y -intercept. The slope is the change in y divided by the change in x .

$$m = \frac{\Delta y}{\Delta x}$$

For the graph above, we can estimate the slope by simply estimating the changes in y and x for a given interval. For example, between $x = 0.4$ mol and 1.2 mol, $\Delta x = 0.80$ mol, and we can estimate that $\Delta y = 18$ L. Therefore, the slope is

$$m = \frac{\Delta y}{\Delta x} = \frac{18 \text{ L}}{0.80 \text{ mol}} = 23 \text{ L/mol}$$

In several places in this book, logarithmic relationships between variables can be plotted in order to obtain a linear relationship. For example, the variables $[A]_t$ and t in the following equation are not linearly related, but the natural logarithm of $[A]_t$ and t are linearly related.

$$\ln[A]_t = -kt + \ln[A]_0$$





















$$y = mx + b$$

A plot of $\ln[A]_t$ versus t will therefore produce a straight line with slope $= -k$ and y -intercept $= \ln[A]_0$.

APPENDIX II

Useful Data

A. Atomic Colors

Atomic number:	1	4	5	6	7	8	9
							
Atomic symbol:	H	Be	B	C	N	O	F
Atomic number:	11	12	14	15	16	17	19
							
Atomic symbol:	Na	Mg	Si	P	S	Cl	K
Atomic number:	20	29	30	35	53	54	
							
Atomic symbol:	Ca	Cu	Zn	Br	I	Xe	

B. Standard Thermodynamic Quantities for Selected Substances at 25 °C

Substance	ΔH_f° (kJ/mol)	ΔG_f° (kJ/mol)	S° (J/mol · K)
Aluminum			
Al(s)	0	0	28.32
Al(g)	330.0	289.4	164.6
Al ³⁺ (aq)	−538.4	−483	−325
AlCl ₃ (s)	−704.2	−628.8	109.3
Al ₂ O ₃ (s)	−1675.7	−1582.3	50.9
Barium			
Ba(s)	0	0	62.5
Ba(g)	180.0	146.0	170.2
Ba ²⁺ (aq)	−537.6	−560.8	9.6

Substance	ΔH_f° (kJ/mol)	ΔG_f° (kJ/mol)	S° (J/mol · K)
BaCO ₃ (s)	−1213.0	−1134.4	112.1
BaCl ₂ (s)	−855.0	−806.7	123.7
BaO(s)	−548.0	−520.3	72.1
Ba(OH) ₂ (s)	−944.7		
BaSO ₄ (s)	−1473.2	−1362.2	132.2
Beryllium			
Be(s)	0	0	9.5
BeO(s)	−609.4	−580.1	13.8
Be(OH) ₂ (s)	−902.5	−815.0	45.5

—Continued on the next page
A-7

Substance	ΔH_f° (kJ/mol)	ΔG_f° (kJ/mol)	S° (J/mol · K)
Bismuth			
Bi(s)	0	0	56.7
BiCl ₃ (s)	−379.1	−315.0	177.0
Bi ₂ O ₃ (s)	−573.9	−493.7	151.5
Bi ₂ S ₃ (s)	−143.1	−140.6	200.4
Boron			
B(s)	0	0	5.9
B(g)	565.0	521.0	153.4
BCl ₃ (g)	−403.8	−388.7	290.1
BF ₃ (g)	−1136.0	−1119.4	254.4
B ₂ H ₆ (g)	36.4	87.6	232.1
B ₂ O ₃ (s)	−1273.5	−1194.3	54.0
H ₃ BO ₃ (s)	−1094.3	−968.9	90.0
Bromine			
Br(g)	111.9	82.4	175.0
Br ₂ (l)	0	0	152.2
Br ₂ (g)	30.9	3.1	245.5
Br [−] (aq)	−121.4	−102.8	80.71
HBr(g)	−36.3	−53.4	198.7
Cadmium			
Cd(s)	0	0	51.8
Cd(g)	111.8	77.3	167.7
Cd ²⁺ (aq)	−75.9	−77.6	−73.2
CdCl ₂ (s)	−391.5	−343.9	115.3
CdO(s)	−258.4	−228.7	54.8
CdS(s)	−161.9	−156.5	64.9
CdSO ₄ (s)	−933.3	−822.7	123.0
Calcium			
Ca(s)	0	0	41.6
Ca(g)	177.8	144.0	154.9
Ca ²⁺ (aq)	−542.8	−553.6	−53.1
CaC ₂ (s)	−59.8	−64.9	70.0
CaCO ₃ (s)	−1207.6	−1129.1	91.7
CaCl ₂ (s)	−795.4	−748.8	108.4
CaF ₂ (s)	−1228.0	−1175.6	68.5
CaH ₂ (s)	−181.5	−142.5	41.4
Ca(NO ₃) ₂ (s)	−938.2	−742.8	193.2
CaO(s)	−634.9	−603.3	38.1
Ca(OH) ₂ (s)	−985.2	−897.5	83.4
CaSO ₄ (s)	−1434.5	−1322.0	106.5
Ca ₃ (PO ₄) ₂ (s)	−4120.8	−3884.7	236.0

Substance	ΔH_f° (kJ/mol)	ΔG_f° (kJ/mol)	S° (J/mol · K)
Carbon			
C(s, graphite)	0	0	5.7
C(s, diamond)	1.88	2.9	2.4
C(g)	716.7	671.3	158.1
CH ₄ (g)	−74.6	−50.5	186.3
CH ₃ Cl(g)	−81.9	−60.2	234.6
CH ₂ Cl ₂ (g)	−95.4		270.2
CH ₂ Cl ₂ (l)	−124.2	−63.2	177.8
CHCl ₃ (l)	−134.1	−73.7	201.7
CCl ₄ (g)	−95.7	−62.3	309.7
CCl ₄ (l)	−128.2	−66.4	216.4
CH ₂ O(g)	−108.6	−102.5	218.8
CH ₂ O ₂ (l, formic acid)	−425.0	−361.4	129.0
CH ₃ NH ₂ (g, methylamine)	−22.5	32.7	242.9
CH ₃ OH(l)	−238.6	−166.6	126.8
CH ₃ OH(g)	−201.0	−162.3	239.9
C ₂ H ₂ (g)	227.4	209.9	200.9
C ₂ H ₄ (g)	52.4	68.4	219.3
C ₂ H ₆ (g)	−84.68	−32.0	229.2
C ₂ H ₅ OH(l)	−277.6	−174.8	160.7
C ₂ H ₅ OH(g)	−234.8	−167.9	281.6
C ₂ H ₃ Cl(g, vinyl chloride)	37.2	53.6	264.0
C ₂ H ₄ Cl ₂ (l, dichloroethane)	−166.8	−79.6	208.5
C ₂ H ₄ O(g, acetaldehyde)	−166.2	−133.0	263.8
C ₂ H ₄ O ₂ (l, acetic acid)	−484.3	−389.9	159.8
C ₃ H ₈ (g)	−103.85	−23.4	270.3
C ₃ H ₆ O (l, acetone)	−248.4	−155.6	199.8
C ₃ H ₇ OH (l, isopropanol)	−318.1		181.1
C ₄ H ₁₀ (l)	−147.3	−15.0	231.0
C ₄ H ₁₀ (g)	−125.7	−15.71	310.0
C ₆ H ₆ (l)	49.1	124.5	173.4
C ₆ H ₅ NH ₂ (l, aniline)	31.6	149.2	191.9
C ₆ H ₅ OH (s, phenol)	−165.1	−50.4	144.0
C ₆ H ₁₂ O ₆ (s, glucose)	−1273.3	−910.4	212.1

Substance	ΔH_f° (kJ/mol)	ΔG_f° (kJ/mol)	S° (J/mol · K)
$C_{10}H_8$ (s, naphthalene)	78.5	201.6	167.4
$C_{12}H_{22}O_{11}$ (s, sucrose)	-2226.1	-1544.3	360.24
CO(g)	-110.5	-137.2	197.7
CO ₂ (g)	-393.5	-394.4	213.8
CO ₂ (aq)	-413.8	-386.0	117.6
CO ₃ ²⁻ (aq)	-677.1	-527.8	-56.9
HCO ₃ ⁻ (aq)	-692.0	-586.8	91.2
H ₂ CO ₃ (aq)	-699.7	-623.2	187.4
CN ⁻ (aq)	151	166	118
HCN(l)	108.9	125.0	112.8
HCN(g)	135.1	124.7	201.8
CS ₂ (l)	89.0	64.6	151.3
CS ₂ (g)	116.7	67.1	237.8
COCl ₂ (g)	-219.1	-204.9	283.5
C ₆₀ (s)	2327.0	2302.0	426.0
Cesium			
Cs(s)	0	0	85.2
Cs(g)	76.5	49.6	175.6
Cs ⁺ (aq)	-258.0	-292.0	132.1
CsBr(s)	-400	-387	117
CsCl(s)	-438	-414	101.2
CsF(s)	-553.5	-525.5	92.8
CsI(s)	-342	-337	127
Chlorine			
Cl(g)	121.3	105.3	165.2
Cl ₂ (g)	0	0	223.1
Cl ⁻ (aq)	-167.1	-131.2	56.6
HCl(g)	-92.3	-95.3	186.9
HCl(aq)	-167.2	-131.2	56.5
ClO ₂ (g)	102.5	120.5	256.8
Cl ₂ O(g)	80.3	97.9	266.2
Chromium			
Cr(s)	0	0	23.8
Cr(g)	396.6	351.8	174.5
Cr ³⁺ (aq)	-1971		
CrO ₄ ²⁻ (aq)	-872.2	-717.1	44
Cr ₂ O ₃ (s)	-1139.7	-1058.1	81.2
Cr ₂ O ₇ ²⁻ (aq)	-1476	-1279	238
Cobalt			
Co(s)	0	0	30.0

Substance	ΔH_f° (kJ/mol)	ΔG_f° (kJ/mol)	S° (J/mol · K)
Co(g)	424.7	380.3	179.5
CoO(s)	-237.9	-214.2	53.0
Co(OH) ₂ (s)	-539.7	-454.3	79.0
Copper			
Cu(s)	0	0	33.2
Cu(g)	337.4	297.7	166.4
Cu ⁺ (aq)	51.9	50.2	-26
Cu ²⁺ (aq)	64.9	65.5	-98
CuCl(s)	-137.2	-119.9	86.2
CuCl ₂ (s)	-220.1	-175.7	108.1
CuO(s)	-157.3	-129.7	42.6
CuS(s)	-53.1	-53.6	66.5
CuSO ₄ (s)	-771.4	-662.2	109.2
Cu ₂ O(s)	-168.6	-146.0	93.1
Cu ₂ S(s)	-79.5	-86.2	120.9
Fluorine			
F(g)	79.38	62.3	158.75
F ₂ (g)	0	0	202.79
F ⁻ (aq)	-335.35	-278.8	-13.8
HF(g)	-273.3	-275.4	173.8
Gold			
Au(s)	0	0	47.4
Au(g)	366.1	326.3	180.5
Helium			
He(g)	0	0	126.2
Hydrogen			
H(g)	218.0	203.3	114.7
H ⁺ (aq)	0	0	0
H ⁺ (g)	1536.3	1517.1	108.9
H ₂ (g)	0	0	130.7
Iodine			
I(g)	106.76	70.2	180.79
I ₂ (s)	0	0	116.14
I ₂ (g)	62.42	19.3	260.69
I ⁻ (aq)	-56.78	-51.57	106.45
HI(g)	26.5	1.7	206.6
Iron			
Fe(s)	0	0	27.3
Fe(g)	416.3	370.7	180.5
Fe ²⁺ (aq)	-87.9	-84.94	113.4
Fe ³⁺ (aq)	-47.69	-10.54	293.3

—Continued on the next page

Substance	ΔH_f° (kJ/mol)	ΔG_f° (kJ/mol)	S° (J/mol · K)
FeCO ₃ (s)	−740.6	−666.7	92.9
FeCl ₂ (s)	−341.8	−302.3	118.0
FeCl ₃ (s)	−399.5	−334.0	142.3
FeO(s)	−272.0	−255.2	60.75
Fe(OH) ₃ (s)	−823.0	−696.5	106.7
FeS ₂ (s)	−178.2	−166.9	52.9
Fe ₂ O ₃ (s)	−824.2	−742.2	87.4
Fe ₃ O ₄ (s)	−1118.4	−1015.4	146.4
Lead			
Pb(s)	0	0	64.8
Pb(g)	195.2	162.2	175.4
Pb ²⁺ (aq)	0.92	−24.4	18.5
PbBr ₂ (s)	−278.7	−261.9	161.5
PbCO ₃ (s)	−699.1	−625.5	131.0
PbCl ₂ (s)	−359.4	−314.1	136.0
PbI ₂ (s)	−175.5	−173.6	174.9
Pb(NO ₃) ₂ (s)	−451.9		
PbO(s)	−217.3	−187.9	68.7
PbO ₂ (s)	−277.4	−217.3	68.6
PbS(s)	−100.4	−98.7	91.2
PbSO ₄ (s)	−920.0	−813.0	148.5
Lithium			
Li(s)	0	0	29.1
Li(g)	159.3	126.6	138.8
Li ⁺ (aq)	−278.47	−293.3	12.24
LiBr(s)	−351.2	−342.0	74.3
LiCl(s)	−408.6	−384.4	59.3
LiF(s)	−616.0	−587.7	35.7
LiI(s)	−270.4	−270.3	86.8
LiNO ₃ (s)	−483.1	−381.1	90.0
LiOH(s)	−487.5	−441.5	42.8
Li ₂ O(s)	−597.9	−561.2	37.6
Magnesium			
Mg(s)	0	0	32.7
Mg(g)	147.1	112.5	148.6
Mg ²⁺ (aq)	−467.0	−455.4	−137
MgCl ₂ (s)	−641.3	−591.8	89.6
MgCO ₃ (s)	−1095.8	−1012.1	65.7
MgF ₂ (s)	−1124.2	−1071.1	57.2
MgO(s)	−601.6	−569.3	27.0
Mg(OH) ₂ (s)	−924.5	−833.5	63.2

Substance	ΔH_f° (kJ/mol)	ΔG_f° (kJ/mol)	S° (J/mol · K)
MgSO ₄ (s)	−1284.9	−1170.6	91.6
Mg ₃ N ₂ (s)	−461	−401	88
Manganese			
Mn(s)	0	0	32.0
Mn(g)	280.7	238.5	173.7
Mn ²⁺ (aq)	−219.4	−225.6	−78.8
MnO(s)	−385.2	−362.9	59.7
MnO ₂ (s)	−520.0	−465.1	53.1
MnO ₄ [−] (aq)	−529.9	−436.2	190.6
Mercury			
Hg(l)	0	0	75.9
Hg(g)	61.4	31.8	175.0
Hg ²⁺ (aq)	170.21	164.4	−36.19
Hg ₂ ²⁺ (aq)	166.87	153.5	65.74
HgCl ₂ (s)	−224.3	−178.6	146.0
HgO(s)	−90.8	−58.5	70.3
HgS(s)	−58.2	−50.6	82.4
Hg ₂ Cl ₂ (s)	−265.4	−210.7	191.6
Nickel			
Ni(s)	0	0	29.9
Ni(g)	429.7	384.5	182.2
NiCl ₂ (s)	−305.3	−259.0	97.7
NiO(s)	−239.7	−211.7	37.99
NiS(s)	−82.0	−79.5	53.0
Nitrogen			
N(g)	472.7	455.5	153.3
N ₂ (g)	0	0	191.6
NF ₃ (g)	−132.1	−90.6	260.8
NH ₃ (g)	−45.9	−16.4	192.8
NH ₃ (aq)	−80.29	−26.50	111.3
NH ₄ ⁺ (aq)	−133.26	−79.31	111.17
NH ₄ Br(s)	−270.8	−175.2	113.0
NH ₄ Cl(s)	−314.4	−202.9	94.6
NH ₄ CN(s)	0.4		
NH ₄ F(s)	−464.0	−348.7	72.0
NH ₄ HCO ₃ (s)	−849.4	−665.9	120.9
NH ₄ I(s)	−201.4	−112.5	117.0
NH ₄ NO ₃ (s)	−365.6	−183.9	151.1
NH ₄ NO ₃ (aq)	−339.9	−190.6	259.8
HNO ₃ (g)	−133.9	−73.5	266.9
HNO ₃ (aq)	−207	−110.9	146

Substance	ΔH_f° (kJ/mol)	ΔG_f° (kJ/mol)	S° (J/mol · K)
NO(g)	91.3	87.6	210.8
NO ₂ (g)	33.2	51.3	240.1
NO ₃ ⁻ (aq)	-206.85	-110.2	146.70
NOBr(g)	82.2	82.4	273.7
NOCl(g)	51.7	66.1	261.7
N ₂ H ₄ (l)	50.6	149.3	121.2
N ₂ H ₄ (g)	95.4	159.4	238.5
N ₂ O(g)	81.6	103.7	220.0
N ₂ O ₄ (l)	-19.5	97.5	209.2
N ₂ O ₄ (g)	9.16	99.8	304.4
N ₂ O ₅ (s)	-43.1	113.9	178.2
N ₂ O ₅ (g)	13.3	117.1	355.7
Oxygen			
O(g)	249.2	231.7	161.1
O ₂ (g)	0	0	205.2
O ₃ (g)	142.7	163.2	238.9
OH ⁻ (aq)	-230.02	-157.3	-10.90
H ₂ O(l)	-285.8	-237.1	70.0
H ₂ O(g)	-241.8	-228.6	188.8
H ₂ O ₂ (l)	-187.8	-120.4	109.6
H ₂ O ₂ (g)	-136.3	-105.6	232.7
Phosphorus			
P(s, white)	0	0	41.1
P(s, red)	-17.6	-12.1	22.8
P(g)	316.5	280.1	163.2
P ₂ (g)	144.0	103.5	218.1
P ₄ (g)	58.9	24.4	280.0
PCl ₃ (l)	-319.7	-272.3	217.1
PCl ₃ (g)	-287.0	-267.8	311.8
PCl ₅ (s)	-443.5		
PCl ₅ (g)	-374.9	-305.0	364.6
PF ₅ (g)	-1594.4	-1520.7	300.8
PH ₃ (g)	5.4	13.5	210.2
POCl ₃ (l)	-597.1	-520.8	222.5
POCl ₃ (g)	-558.5	-512.9	325.5
PO ₄ ³⁻ (aq)	-1277.4	-1018.7	-220.5
HPO ₄ ²⁻ (aq)	-1292.1	-1089.2	-33.5
H ₂ PO ₄ ⁻ (aq)	-1296.3	-1130.2	90.4
H ₃ PO ₄ (s)	-1284.4	-1124.3	110.5
H ₃ PO ₄ (aq)	-1288.3	-1142.6	158.2

Substance	ΔH_f° (kJ/mol)	ΔG_f° (kJ/mol)	S° (J/mol · K)
P ₄ O ₆ (s)	-1640.1		
P ₄ O ₁₀ (s)	-2984	-2698	228.9
Platinum			
Pt(s)	0	0	41.6
Pt(g)	565.3	520.5	192.4
Potassium			
K(s)	0	0	64.7
K(g)	89.0	60.5	160.3
K ⁺ (aq)	-252.14	-283.3	101.2
KBr(s)	-393.8	-380.7	95.9
KCN(s)	-113.0	-101.9	128.5
KCl(s)	-436.5	-408.5	82.6
KClO ₃ (s)	-397.7	-296.3	143.1
KClO ₄ (s)	-432.8	-303.1	151.0
KF(s)	-567.3	-537.8	66.6
KI(s)	-327.9	-324.9	106.3
KNO ₃ (s)	-494.6	-394.9	133.1
KOH(s)	-424.6	-379.4	81.2
KOH(aq)	-482.4	-440.5	91.6
KO ₂ (s)	-284.9	-239.4	116.7
K ₂ CO ₃ (s)	-1151.0	-1063.5	155.5
K ₂ O(s)	-361.5	-322.1	94.14
K ₂ O ₂ (s)	-494.1	-425.1	102.1
K ₂ SO ₄ (s)	-1437.8	-1321.4	175.6
Rubidium			
Rb(s)	0	0	76.8
Rb(g)	80.9	53.1	170.1
Rb ⁺ (aq)	-251.12	-283.1	121.75
RbBr(s)	-394.6	-381.8	110.0
RbCl(s)	-435.4	-407.8	95.9
RbClO ₃ (s)	-392.4	-292.0	152
RbF(s)	-557.7		
RbI(s)	-333.8	-328.9	118.4
Scandium			
Sc(s)	0	0	34.6
Sc(g)	377.8	336.0	174.8
Selenium			
Se(s, gray)	0	0	42.4
Se(g)	227.1	187.0	176.7
H ₂ Se(g)	29.7	15.9	219.0

—Continued on the next page

Substance	ΔH_f° (kJ/mol)	ΔG_f° (kJ/mol)	S° (J/mol · K)
Silicon			
Si(s)	0	0	18.8
Si(g)	450.0	405.5	168.0
SiCl ₄ (l)	−687.0	−619.8	239.7
SiF ₄ (g)	−1615.0	−1572.8	282.8
SiH ₄ (g)	34.3	56.9	204.6
SiO ₂ (s, quartz)	−910.7	−856.3	41.5
Si ₂ H ₆ (g)	80.3	127.3	272.7
Silver			
Ag(s)	0	0	42.6
Ag(g)	284.9	246.0	173.0
Ag ⁺ (aq)	105.79	77.11	73.45
AgBr(s)	−100.4	−96.9	107.1
AgCl(s)	−127.0	−109.8	96.3
AgF(s)	−204.6	−185	84
AgI(s)	−61.8	−66.2	115.5
AgNO ₃ (s)	−124.4	−33.4	140.9
Ag ₂ O(s)	−31.1	−11.2	121.3
Ag ₂ S(s)	−32.6	−40.7	144.0
Ag ₂ SO ₄ (s)	−715.9	−618.4	200.4
Sodium			
Na(s)	0	0	51.3
Na(g)	107.5	77.0	153.7
Na ⁺ (aq)	−240.34	−261.9	58.45
NaBr(s)	−361.1	−349.0	86.8
NaCl(s)	−411.2	−384.1	72.1
NaCl(aq)	−407.2	−393.1	115.5
NaClO ₃ (s)	−365.8	−262.3	123.4
NaF(s)	−576.6	−546.3	51.1
NaHCO ₃ (s)	−950.8	−851.0	101.7
NaHSO ₄ (s)	−1125.5	−992.8	113.0
NaI(s)	−287.8	−286.1	98.5
NaNO ₃ (s)	−467.9	−367.0	116.5
NaNO ₃ (aq)	−447.5	−373.2	205.4
NaOH(s)	−425.8	−379.7	64.4
NaOH(aq)	−470.1	−419.2	48.2
NaO ₂ (s)	−260.2	−218.4	115.9
Na ₂ CO ₃ (s)	−1130.7	−1044.4	135.0
Na ₂ O(s)	−414.2	−375.5	75.1
Na ₂ O ₂ (s)	−510.9	−447.7	95.0

Substance	ΔH_f° (kJ/mol)	ΔG_f° (kJ/mol)	S° (J/mol · K)
Na ₂ SO ₄ (s)	−1387.1	−1270.2	149.6
Na ₃ PO ₄ (s)	−1917	−1789	173.8
Strontium			
Sr(s)	0	0	55.0
Sr(g)	164.4	130.9	164.6
Sr ²⁺ (aq)	−545.51	−557.3	−39
SrCl ₂ (s)	−828.9	−781.1	114.9
SrCO ₃ (s)	−1220.1	−1140.1	97.1
SrO(s)	−592.0	−561.9	54.4
SrSO ₄ (s)	−1453.1	−1340.9	117.0
Sulfur			
S(s, rhombic)	0	0	32.1
S(s, monoclinic)	0.3	0.096	32.6
S(g)	277.2	236.7	167.8
S ₂ (g)	128.6	79.7	228.2
S ₈ (g)	102.3	49.7	430.9
S ^{2−} (aq)	41.8	83.7	22
SF ₆ (g)	−1220.5	−1116.5	291.5
HS [−] (aq)	−17.7	12.4	62.0
H ₂ S(g)	−20.6	−33.4	205.8
H ₂ S(aq)	−39.4	−27.7	122
SOCl ₂ (l)	−245.6		
SO ₂ (g)	−296.8	−300.1	248.2
SO ₃ (g)	−395.7	−371.1	256.8
SO ₄ ^{2−} (aq)	−909.3	−744.6	18.5
HSO ₄ [−] (aq)	−886.5	−754.4	129.5
H ₂ SO ₄ (l)	−814.0	−690.0	156.9
H ₂ SO ₄ (aq)	−909.3	−744.6	18.5
S ₂ O ₃ ^{2−} (aq)	−648.5	−522.5	67
Tin			
Sn(s, white)	0	0	51.2
Sn(s, gray)	−2.1	0.1	44.1
Sn(g)	301.2	266.2	168.5
SnCl ₄ (l)	−511.3	−440.1	258.6
SnCl ₄ (g)	−471.5	−432.2	365.8
SnO(s)	−280.7	−251.9	57.2
SnO ₂ (s)	−577.6	−515.8	49.0
Titanium			
Ti(s)	0	0	30.7
Ti(g)	473.0	428.4	180.3

Substance	ΔH_f° (kJ/mol)	ΔG_f° (kJ/mol)	S° (J/mol · K)
TiCl ₄ (l)	−804.2	−737.2	252.3
TiCl ₄ (g)	−763.2	−726.3	353.2
TiO ₂ (s)	−944.0	−888.8	50.6
Tungsten			
W(s)	0	0	32.6
W(g)	849.4	807.1	174.0
WO ₃ (s)	−842.9	−764.0	75.9
Uranium			
U(s)	0	0	50.2
U(g)	533.0	488.4	199.8
UF ₆ (s)	−2197.0	−2068.5	227.6
UF ₆ (g)	−2147.4	−2063.7	377.9
UO ₂ (s)	−1085.0	−1031.8	77.0

Substance	ΔH_f° (kJ/mol)	ΔG_f° (kJ/mol)	S° (J/mol · K)
Vanadium			
V(s)	0	0	28.9
V(g)	514.2	754.4	182.3
Zinc			
Zn(s)	0	0	41.6
Zn(g)	130.4	94.8	161.0
Zn ²⁺ (aq)	−153.39	−147.1	−109.8
ZnCl ₂ (s)	−415.1	−369.4	111.5
ZnO(s)	−350.5	−320.5	43.7
ZnS (s, zinc blende)	−206.0	−201.3	57.7
ZnSO ₄ (s)	−982.8	−871.5	110.5

C. Aqueous Equilibrium Constants

1. Ionization Constants for Acids at 25°C

Name	Formula	K_{a1}	K_{a2}	K_{a3}
Acetic	HC ₂ H ₃ O ₂	1.8×10^{-5}		
Acetylsalicylic	HC ₉ H ₇ O ₄	3.3×10^{-4}		
Adipic	H ₂ C ₆ H ₈ O ₄	3.9×10^{-5}	3.9×10^{-6}	
Arsenic	H ₃ AsO ₄	5.5×10^{-3}	1.7×10^{-7}	5.1×10^{-12}
Arsenous	H ₃ AsO ₃	5.1×10^{-10}		
Ascorbic	H ₂ C ₆ H ₆ O ₆	8.0×10^{-5}	1.6×10^{-12}	
Benzoic	HC ₇ H ₅ O ₂	6.5×10^{-5}		
Boric	H ₃ BO ₃	5.4×10^{-10}		
Butanoic	HC ₄ H ₇ O ₂	1.5×10^{-5}		
Carbonic	H ₂ CO ₃	4.3×10^{-7}	5.6×10^{-11}	
Chloroacetic	HC ₂ H ₂ O ₂ Cl	1.4×10^{-3}		
Chlorous	HCIO ₂	1.1×10^{-2}		
Citric	H ₃ C ₆ H ₅ O ₇	7.4×10^{-4}	1.7×10^{-5}	4.0×10^{-7}
Cyanic	HCNO	2×10^{-4}		
Formic	HCHO ₂	1.8×10^{-4}		
Hydrazoic	HN ₃	2.5×10^{-5}		
Hydrocyanic	HCN	4.9×10^{-10}		
Hydrofluoric	HF	3.5×10^{-4}		
Hydrogen chromate ion	HCrO ₄ [−]	3.0×10^{-7}		
Hydrogen peroxide	H ₂ O ₂	2.4×10^{-12}		
Hydrogen selenate ion	HSeO ₄ [−]	2.2×10^{-2}		
Hydrosulfuric	H ₂ S	8.9×10^{-8}	1×10^{-19}	

Name	Formula	K_{a1}	K_{a2}	K_{a3}
Hydrotelluric	H ₂ Te	2.3×10^{23}	1.6×10^{-11}	
Hypobromous	HBrO	2.8×10^{-9}		
Hypochlorous	HCIO	2.9×10^{-8}		
Hypoiodous	HIO	2.3×10^{-11}		
Iodic	HIO ₃	1.7×10^{-1}		
Lactic	HC ₃ H ₅ O ₃	1.4×10^{-4}		
Maleic	H ₂ C ₄ H ₂ O ₄	1.2×10^{-2}	5.9×10^{-7}	
Malonic	H ₂ C ₃ H ₂ O ₄	1.5×10^{-3}	2.0×10^{-6}	
Nitrous	HNO ₂	4.6×10^{-4}		
Oxalic	H ₂ C ₂ O ₄	6.0×10^{-2}	6.1×10^{-5}	
Paraperiodic	H ₅ IO ₆	2.8×10^{-2}	5.3×10^{-9}	
Phenol	HC ₆ H ₅ O	1.3×10^{-10}		
Phosphoric	H ₃ PO ₄	7.5×10^{-3}	6.2×10^{-8}	4.2×10^{-13}
Phosphorous	H ₃ PO ₃	5×10^{-2}	2.0×10^{-7}	
Propanoic	HC ₃ H ₅ O ₂	1.3×10^{-5}		
Pyruvic	HC ₃ H ₃ O ₃	4.1×10^{-3}		
Pyrophosphoric	H ₄ P ₂ O ₇	1.2×10^{-1}	7.9×10^{-3}	2.0×10^{-7}
Selenous	H ₂ SeO ₃	2.4×10^{-3}	4.8×10^{-9}	
Succinic	H ₂ C ₄ H ₄ O ₄	6.2×10^{-5}	2.3×10^{-6}	
Sulfuric	H ₂ SO ₄	Strong acid	1.2×10^{-2}	
Sulfurous	H ₂ SO ₃	1.6×10^{-2}	6.4×10^{-8}	
Tartaric	H ₂ C ₄ H ₄ O ₆	1.0×10^{-3}	4.6×10^{-5}	
Trichloroacetic	HC ₂ Cl ₃ O ₂	2.2×10^{-1}		
Trifluoroacetic acid	HC ₂ F ₃ O ₂	3.0×10^{-1}		

2. Dissociation Constants for Hydrated Metal Ions at 25°C

Cation	Hydrated Ion	K_a
Al ³⁺	Al(H ₂ O) ₆ ³⁺	1.4×10^{-5}
Be ²⁺	Be(H ₂ O) ₆ ²⁺	3×10^{-7}
Co ²⁺	Co(H ₂ O) ₆ ²⁺	1.3×10^{-9}
Cr ³⁺	Cr(H ₂ O) ₆ ³⁺	1.6×10^{-4}
Cu ²⁺	Cu(H ₂ O) ₆ ²⁺	3×10^{-8}
Fe ²⁺	Fe(H ₂ O) ₆ ²⁺	3.2×10^{-10}

Cation	Hydrated Ion	K_a
Fe ³⁺	Fe(H ₂ O) ₆ ³⁺	6.3×10^{-3}
Ni ²⁺	Ni(H ₂ O) ₆ ²⁺	2.5×10^{-11}
Pb ²⁺	Pb(H ₂ O) ₆ ²⁺	3×10^{-8}
Sn ²⁺	Sn(H ₂ O) ₆ ²⁺	4×10^{-4}
Zn ²⁺	Zn(H ₂ O) ₆ ²⁺	2.5×10^{-10}

3. Ionization Constants for Bases at 25°C

Name	Formula	K_b
Ammonia	NH ₃	1.76×10^{-5}
Aniline	C ₆ H ₅ NH ₂	3.9×10^{-10}
Bicarbonate ion	HCO ₃ ⁻	2.3×10^{-8}
Carbonate ion	CO ₃ ²⁻	1.8×10^{-4}
Codeine	C ₁₈ H ₂₁ NO ₃	1.6×10^{-6}
Diethylamine	(C ₂ H ₅) ₂ NH	6.9×10^{-4}
Dimethylamine	(CH ₃) ₂ NH	5.4×10^{-4}
Ethylamine	C ₂ H ₅ NH ₂	5.6×10^{-4}
Ethylenediamine	C ₂ H ₈ N ₂	8.3×10^{-5}
Hydrazine	H ₂ NNH ₂	1.3×10^{-6}
Hydroxylamine	HONH ₂	1.1×10^{-8}

Name	Formula	K_b
Ketamine	C ₁₃ H ₁₆ ClNO	3×10^{-7}
Methylamine	CH ₃ NH ₂	4.4×10^{-4}
Morphine	C ₁₇ H ₁₉ NO ₃	1.6×10^{-6}
Nicotine	C ₁₀ H ₁₄ N ₂	1.0×10^{-6}
Piperidine	C ₅ H ₁₀ NH	1.33×10^{-3}
Propylamine	C ₃ H ₇ NH ₂	3.5×10^{-4}
Pyridine	C ₅ H ₅ N	1.7×10^{-9}
Strychnine	C ₂₁ H ₂₂ N ₂ O ₂	1.8×10^{-6}
Triethylamine	(C ₂ H ₅) ₃ N	5.6×10^{-4}
Trimethylamine	(CH ₃) ₃ N	6.4×10^{-5}

4. Solubility Product Constants for Compounds at 25°C

Compound	Formula	K_{sp}
Aluminum hydroxide	Al(OH) ₃	1.3×10^{-33}
Aluminum phosphate	AlPO ₄	9.84×10^{-21}
Barium carbonate	BaCO ₃	2.58×10^{-9}
Barium chromate	BaCrO ₄	1.17×10^{-10}
Barium fluoride	BaF ₂	2.45×10^{-5}
Barium hydroxide	Ba(OH) ₂	5.0×10^{-3}
Barium oxalate	BaC ₂ O ₄	1.6×10^{-6}
Barium phosphate	Ba ₃ (PO ₄) ₂	6×10^{-39}
Barium sulfate	BaSO ₄	1.07×10^{-10}
Cadmium carbonate	CdCO ₃	1.0×10^{-12}
Cadmium hydroxide	Cd(OH) ₂	7.2×10^{-15}
Cadmium sulfide	CdS	8×10^{-28}
Calcium carbonate	CaCO ₃	4.96×10^{-9}

Compound	Formula	K_{sp}
Calcium chromate	CaCrO ₄	7.1×10^{-4}
Calcium fluoride	CaF ₂	1.46×10^{-10}
Calcium hydroxide	Ca(OH) ₂	4.68×10^{-6}
Calcium hydrogen phosphate	CaHPO ₄	1×10^{-7}
Calcium oxalate	CaC ₂ O ₄	2.32×10^{-9}
Calcium phosphate	Ca ₃ (PO ₄) ₂	2.07×10^{-33}
Calcium sulfate	CaSO ₄	7.10×10^{-5}
Chromium(III) hydroxide	Cr(OH) ₃	6.3×10^{-31}
Cobalt(II) carbonate	CoCO ₃	1.0×10^{-10}
Cobalt(II) hydroxide	Co(OH) ₂	5.92×10^{-15}
Cobalt(II) sulfide	CoS	5×10^{-22}
Copper(I) bromide	CuBr	6.27×10^{-9}
Copper(I) chloride	CuCl	1.72×10^{-7}

Compound	Formula	K_{sp}
Copper(I) cyanide	CuCN	3.47×10^{-20}
Copper(II) carbonate	CuCO ₃	2.4×10^{-10}
Copper(II) hydroxide	Cu(OH) ₂	2.2×10^{-20}
Copper(II) phosphate	Cu ₃ (PO ₄) ₂	1.40×10^{-37}
Copper(II) sulfide	CuS	1.27×10^{-36}
Iron(II) carbonate	FeCO ₃	3.07×10^{-11}
Iron(II) hydroxide	Fe(OH) ₂	4.87×10^{-17}
Iron(II) sulfide	FeS	3.72×10^{-19}
Iron(III) hydroxide	Fe(OH) ₃	2.79×10^{-39}
Lanthanum fluoride	LaF ₃	2×10^{-19}
Lanthanum iodate	La(IO ₃) ₃	7.50×10^{-12}
Lead(II) bromide	PbBr ₂	4.67×10^{-6}
Lead(II) carbonate	PbCO ₃	7.40×10^{-14}
Lead(II) chloride	PbCl ₂	1.17×10^{-5}
Lead(II) chromate	PbCrO ₄	2.8×10^{-13}
Lead(II) fluoride	PbF ₂	3.3×10^{-8}
Lead(II) hydroxide	Pb(OH) ₂	1.43×10^{-20}
Lead(II) iodide	PbI ₂	9.8×10^{-9}
Lead(II) phosphate	Pb ₃ (PO ₄) ₂	1×10^{-54}
Lead(II) sulfate	PbSO ₄	1.82×10^{-8}
Lead(II) sulfide	PbS	9.04×10^{-29}
Magnesium carbonate	MgCO ₃	6.82×10^{-6}
Magnesium fluoride	MgF ₂	5.16×10^{-11}
Magnesium hydroxide	Mg(OH) ₂	2.06×10^{-13}
Magnesium oxalate	MgC ₂ O ₄	4.83×10^{-6}
Manganese(II) carbonate	MnCO ₃	2.24×10^{-11}
Manganese(II) hydroxide	Mn(OH) ₂	1.6×10^{-13}
Manganese(II) sulfide	MnS	2.3×10^{-13}
Mercury(I) bromide	Hg ₂ Br ₂	6.40×10^{-23}
Mercury(I) carbonate	Hg ₂ CO ₃	3.6×10^{-17}

Compound	Formula	K_{sp}
Mercury(I) chloride	Hg ₂ Cl ₂	1.43×10^{-18}
Mercury(I) chromate	Hg ₂ CrO ₄	2×10^{-9}
Mercury(I) cyanide	Hg ₂ (CN) ₂	5×10^{-40}
Mercury(I) iodide	Hg ₂ I ₂	5.2×10^{-29}
Mercury(II) hydroxide	Hg(OH) ₂	3.1×10^{-26}
Mercury(II) sulfide	HgS	1.6×10^{-54}
Nickel(II) carbonate	NiCO ₃	1.42×10^{-7}
Nickel(II) hydroxide	Ni(OH) ₂	5.48×10^{-16}
Nickel(II) sulfide	NiS	3×10^{-20}
Silver bromate	AgBrO ₃	5.38×10^{-5}
Silver bromide	AgBr	5.35×10^{-13}
Silver carbonate	Ag ₂ CO ₃	8.46×10^{-12}
Silver chloride	AgCl	1.77×10^{-10}
Silver chromate	Ag ₂ CrO ₄	1.12×10^{-12}
Silver cyanide	AgCN	5.97×10^{-17}
Silver iodide	AgI	8.51×10^{-17}
Silver phosphate	Ag ₃ PO ₄	8.89×10^{-17}
Silver sulfate	Ag ₂ SO ₄	1.20×10^{-5}
Silver sulfide	Ag ₂ S	6×10^{-51}
Strontium carbonate	SrCO ₃	5.60×10^{-10}
Strontium chromate	SrCrO ₄	3.6×10^{-5}
Strontium phosphate	Sr ₃ (PO ₄) ₂	1×10^{-31}
Strontium sulfate	SrSO ₄	3.44×10^{-7}
Tin(II) hydroxide	Sn(OH) ₂	5.45×10^{-27}
Tin(II) sulfide	SnS	1×10^{-26}
Zinc carbonate	ZnCO ₃	1.46×10^{-10}
Zinc hydroxide	Zn(OH) ₂	3×10^{-17}
Zinc oxalate	ZnC ₂ O ₄	2.7×10^{-8}
Zinc sulfide	ZnS	2×10^{-25}

5. Complex Ion Formation Constants in Water at 25°C

Complex Ion	K_f
[Ag(CN) ₂] ⁻	1×10^{21}
[Ag(EDTA)] ³⁻	2.1×10^7

Complex Ion	K_f
[Ag(en) ₂] ⁺	5.0×10^7
[Ag(NH ₃) ₂] ⁺	1.7×10^7

—Continued on the next page

Complex Ion	K_f
$[\text{Ag}(\text{SCN})_4]^{3-}$	1.2×10^{10}
$[\text{Ag}(\text{S}_2\text{O}_3)_2]^{3-}$	2.8×10^{13}
$[\text{Al}(\text{EDTA})]^-$	1.3×10^{16}
$[\text{AlF}_6]^{3-}$	7×10^{19}
$[\text{Al}(\text{OH})_4]^-$	3×10^{33}
$[\text{Al}(\text{ox})_3]^{3-}$	2×10^{16}
$[\text{CdBr}_4]^{2-}$	5.5×10^3
$[\text{Cd}(\text{CN})_4]^{2-}$	3×10^{18}
$[\text{CdCl}_4]^{2-}$	6.3×10^2
$[\text{Cd}(\text{en})_3]^{2+}$	1.2×10^{12}
$[\text{CdI}_4]^{2-}$	2×10^6
$[\text{Co}(\text{EDTA})]^{2-}$	2.0×10^{16}
$[\text{Co}(\text{EDTA})]^-$	1×10^{36}
$[\text{Co}(\text{en})_3]^{2+}$	8.7×10^{13}
$[\text{Co}(\text{en})_3]^{3+}$	4.9×10^{48}
$[\text{Co}(\text{NH}_3)_6]^{2+}$	1.3×10^5
$[\text{Co}(\text{NH}_3)_6]^{3+}$	2.3×10^{33}
$[\text{Co}(\text{OH})_4]^{2-}$	5×10^9
$[\text{Co}(\text{ox})_3]^{4-}$	5×10^9
$[\text{Co}(\text{ox})_3]^{3-}$	1×10^{20}
$[\text{Co}(\text{SCN})_4]^{2-}$	1×10^3
$[\text{Cr}(\text{EDTA})]^-$	1×10^{23}
$[\text{Cr}(\text{OH})_4]^-$	8.0×10^{29}
$[\text{CuCl}_3]^{2-}$	5×10^5
$[\text{Cu}(\text{CN})_4]^{2-}$	1.0×10^{25}
$[\text{Cu}(\text{EDTA})]^{2-}$	5×10^{18}
$[\text{Cu}(\text{en})_2]^{2+}$	1×10^{20}
$[\text{Cu}(\text{NH}_3)_4]^{2+}$	1.7×10^{13}
$[\text{Cu}(\text{ox})_2]^{2-}$	3×10^8
$[\text{Fe}(\text{CN})_6]^{4-}$	1.5×10^{35}
$[\text{Fe}(\text{CN})_6]^{3-}$	2×10^{43}
$[\text{Fe}(\text{EDTA})]^{2-}$	2.1×10^{14}

Complex Ion	K_f
$[\text{Fe}(\text{EDTA})]^-$	1.7×10^{24}
$[\text{Fe}(\text{en})_3]^{2+}$	5.0×10^9
$[\text{Fe}(\text{ox})_3]^{4-}$	1.7×10^5
$[\text{Fe}(\text{ox})_3]^{3-}$	2×10^{20}
$[\text{Fe}(\text{SCN})]^{2+}$	8.9×10^2
$[\text{Hg}(\text{CN})_4]^{2-}$	1.8×10^{41}
$[\text{HgCl}_4]^{2-}$	1.1×10^{16}
$[\text{Hg}(\text{EDTA})]^{2-}$	6.3×10^{21}
$[\text{Hg}(\text{en})_2]^{2+}$	2×10^{23}
$[\text{HgI}_4]^{2-}$	2×10^{30}
$[\text{Hg}(\text{ox})_2]^{2-}$	9.5×10^6
$[\text{Ni}(\text{CN})_4]^{2-}$	2×10^{31}
$[\text{Ni}(\text{EDTA})]^{2-}$	3.6×10^{18}
$[\text{Ni}(\text{en})_3]^{2+}$	2.1×10^{18}
$[\text{Ni}(\text{NH}_3)_6]^{2+}$	2.0×10^8
$[\text{Ni}(\text{ox})_3]^{4-}$	3×10^8
$[\text{PbCl}_3]^-$	2.4×10^1
$[\text{Pb}(\text{EDTA})]^{2-}$	2×10^{18}
$[\text{PbI}_4]^{2-}$	3.0×10^4
$[\text{Pb}(\text{OH})_3]^-$	8×10^{13}
$[\text{Pb}(\text{ox})_2]^{2-}$	3.5×10^6
$[\text{Pb}(\text{S}_2\text{O}_3)_3]^{4-}$	2.2×10^6
$[\text{PtCl}_4]^{2-}$	1×10^{16}
$[\text{Pt}(\text{NH}_3)_6]^{2+}$	2×10^{35}
$[\text{Sn}(\text{OH})_3]^-$	3×10^{25}
$[\text{Zn}(\text{CN})_4]^{2-}$	2.1×10^{19}
$[\text{Zn}(\text{EDTA})]^{2-}$	3×10^{16}
$[\text{Zn}(\text{en})_3]^{2+}$	1.3×10^{14}
$[\text{Zn}(\text{NH}_3)_4]^{2+}$	2.8×10^9
$[\text{Zn}(\text{OH})_4]^{2-}$	2×10^{15}
$[\text{Zn}(\text{ox})_3]^{4-}$	1.4×10^8

D. Standard Electrode Potentials at 25°C

Half-Reaction	$E^\circ(\text{V})$
$\text{F}_2(\text{g}) + 2 \text{e}^- \longrightarrow 2 \text{F}^-(\text{aq})$	2.87
$\text{O}_3(\text{g}) + 2 \text{H}^+(\text{aq}) + 2 \text{e}^- \longrightarrow \text{O}_2(\text{g}) + \text{H}_2(\text{l})$	2.08
$\text{Ag}^+(\text{aq}) + \text{e}^- \longrightarrow \text{Ag}(\text{s})$	1.98
$\text{Co}^{3+}(\text{aq}) + \text{e}^- \longrightarrow \text{Co}^{2+}(\text{aq})$	1.82
$\text{H}_2\text{O}_2(\text{aq}) + 2 \text{H}^+(\text{aq}) + 2 \text{e}^- \longrightarrow 2 \text{H}_2\text{O}(\text{l})$	1.78
$\text{PbO}_2(\text{s}) + 4 \text{H}^+(\text{aq}) + \text{SO}_4^{2-}(\text{aq}) + 2 \text{e}^- \longrightarrow \text{PbSO}_4(\text{s}) + 2 \text{H}_2\text{O}(\text{l})$	1.69
$\text{MnO}_4^-(\text{aq}) + 4 \text{H}^+(\text{aq}) + 3 \text{e}^- \longrightarrow \text{MnO}_2(\text{s}) + 2 \text{H}_2\text{O}(\text{l})$	1.68
$2 \text{HClO}(\text{aq}) + 2 \text{H}^+(\text{aq}) + 2 \text{e}^- \longrightarrow \text{Cl}_2(\text{g}) + 2 \text{H}_2\text{O}(\text{l})$	1.61
$\text{MnO}_4^-(\text{aq}) + 8 \text{H}^+(\text{aq}) + 5 \text{e}^- \longrightarrow \text{Mn}^{2+}(\text{aq}) + 4 \text{H}_2\text{O}(\text{l})$	1.51
$\text{Au}^{3+}(\text{aq}) + 3 \text{e}^- \longrightarrow \text{Au}(\text{s})$	1.50
$2 \text{BrO}_3^-(\text{aq}) + 12 \text{H}^+(\text{aq}) + 10 \text{e}^- \longrightarrow \text{Br}_2(\text{l}) + 6 \text{H}_2\text{O}(\text{l})$	1.48
$\text{PbO}_2(\text{s}) + 4 \text{H}^+(\text{aq}) + 2 \text{e}^- \longrightarrow \text{Pb}^{2+}(\text{aq}) + 2 \text{H}_2\text{O}(\text{l})$	1.46
$\text{Cl}_2(\text{g}) + 2 \text{e}^- \longrightarrow 2 \text{Cl}^-(\text{aq})$	1.36
$\text{Cr}_2\text{O}_7^{2-}(\text{aq}) + 14 \text{H}^+(\text{aq}) + 6 \text{e}^- \longrightarrow 2 \text{Cr}^{3+}(\text{aq}) + 7 \text{H}_2\text{O}(\text{l})$	1.33
$\text{O}_2(\text{g}) + 4 \text{H}^+(\text{aq}) + 4 \text{e}^- \longrightarrow 2 \text{H}_2\text{O}(\text{l})$	1.23
$\text{MnO}_2(\text{s}) + 4 \text{H}^+(\text{aq}) + 2 \text{e}^- \longrightarrow \text{Mn}^{2+}(\text{aq}) + 2 \text{H}_2\text{O}(\text{l})$	1.21
$\text{IO}_3^-(\text{aq}) + 6 \text{H}^+(\text{aq}) + 5 \text{e}^- \longrightarrow \frac{1}{2} \text{I}_2(\text{aq}) + 3 \text{H}_2\text{O}(\text{l})$	1.20
$\text{Br}_2(\text{l}) + 2 \text{e}^- \longrightarrow 2 \text{Br}^-(\text{aq})$	1.09
$\text{AuCl}_4^-(\text{aq}) + 3 \text{e}^- \longrightarrow \text{Au}(\text{s}) + 4 \text{Cl}^-(\text{aq})$	1.00
$\text{VO}_2^+(\text{aq}) + 2 \text{H}^+(\text{aq}) + \text{e}^- \longrightarrow \text{VO}^{2+}(\text{aq}) + \text{H}_2\text{O}(\text{l})$	1.00
$\text{HNO}_2(\text{aq}) + \text{H}^+(\text{aq}) + \text{e}^- \longrightarrow \text{NO}(\text{g}) + 2 \text{H}_2\text{O}(\text{l})$	0.98
$\text{NO}_3^-(\text{aq}) + 4 \text{H}^+(\text{aq}) + 3 \text{e}^- \longrightarrow \text{NO}(\text{g}) + 2 \text{H}_2\text{O}(\text{l})$	0.96
$\text{ClO}_2(\text{g}) + \text{e}^- \longrightarrow \text{ClO}_2^-(\text{aq})$	0.95
$2 \text{Hg}_2^{2+}(\text{aq}) + 2 \text{e}^- \longrightarrow 2 \text{Hg}_2^{2+}(\text{aq})$	0.92
$\text{Ag}^+(\text{aq}) + \text{e}^- \longrightarrow \text{Ag}(\text{s})$	0.80
$\text{Hg}_2^{2+}(\text{aq}) + 2 \text{e}^- \longrightarrow 2 \text{Hg}(\text{l})$	0.80
$\text{Fe}^{3+}(\text{aq}) + \text{e}^- \longrightarrow \text{Fe}^{2+}(\text{aq})$	0.77
$\text{PtCl}_4^{2-}(\text{aq}) + 2 \text{e}^- \longrightarrow \text{Pt}(\text{s}) + 4 \text{Cl}^-(\text{aq})$	0.76
$\text{O}_2(\text{g}) + 2 \text{H}^+(\text{aq}) + 2 \text{e}^- \longrightarrow \text{H}_2\text{O}_2(\text{aq})$	0.70

Half-Reaction	$E^\circ(\text{V})$
$\text{MnO}_4^-(\text{aq}) + \text{e}^- \longrightarrow \text{MnO}_4^{2-}(\text{aq})$	0.56
$\text{I}_2(\text{s}) + 2 \text{e}^- \longrightarrow 2 \text{I}^-(\text{aq})$	0.54
$\text{Cu}^+(\text{aq}) + \text{e}^- \longrightarrow \text{Cu}(\text{s})$	0.52
$\text{O}_2(\text{g}) + 2 \text{H}_2\text{O}(\text{l}) + 4 \text{e}^- \longrightarrow 4 \text{OH}^-(\text{aq})$	0.40
$\text{Cu}^{2+}(\text{aq}) + 2 \text{e}^- \longrightarrow \text{Cu}(\text{s})$	0.34
$\text{BiO}^+(\text{aq}) + 2 \text{H}^+(\text{aq}) + 3 \text{e}^- \longrightarrow \text{Bi}(\text{s}) + \text{H}_2\text{O}(\text{l})$	0.32
$\text{Hg}_2\text{Cl}_2(\text{s}) + 2 \text{e}^- \longrightarrow 2 \text{Hg}(\text{l}) + 2 \text{Cl}^-(\text{aq})$	0.27
$\text{AgCl}(\text{s}) + \text{e}^- \longrightarrow \text{Ag}(\text{s}) + \text{Cl}^-(\text{aq})$	0.22
$\text{SO}_4^{2-}(\text{aq}) + 4 \text{H}^+(\text{aq}) + 2 \text{e}^- \longrightarrow \text{H}_2\text{SO}_3(\text{aq}) + \text{H}_2\text{O}(\text{l})$	0.20
$\text{Cu}^{2+}(\text{aq}) + \text{e}^- \longrightarrow \text{Cu}^+(\text{aq})$	0.16
$\text{Sn}^{4+}(\text{aq}) + 2 \text{e}^- \longrightarrow \text{Sn}^{2+}(\text{aq})$	0.15
$\text{S}(\text{s}) + 2 \text{H}^+(\text{aq}) + 2 \text{e}^- \longrightarrow \text{H}_2\text{S}(\text{g})$	0.14
$\text{AgBr}(\text{s}) + \text{e}^- \longrightarrow \text{Ag}(\text{s}) + \text{Br}^-(\text{aq})$	0.071
$2 \text{H}^+(\text{aq}) + 2 \text{e}^- \longrightarrow \text{H}_2(\text{g})$	0.00
$\text{Fe}^{3+}(\text{aq}) + 3 \text{e}^- \longrightarrow \text{Fe}(\text{s})$	-0.036
$\text{Pb}^{2+}(\text{aq}) + 2 \text{e}^- \longrightarrow \text{Pb}(\text{s})$	-0.13
$\text{Sn}^{2+}(\text{aq}) + 2 \text{e}^- \longrightarrow \text{Sn}(\text{s})$	-0.14
$\text{AgI}(\text{s}) + \text{e}^- \longrightarrow \text{Ag}(\text{s}) + \text{I}^-(\text{aq})$	-0.15
$\text{N}_2(\text{g}) + 5 \text{H}^+(\text{aq}) + 4 \text{e}^- \longrightarrow \text{N}_2\text{H}_5^+(\text{aq})$	-0.23
$\text{Ni}^{2+}(\text{aq}) + 2 \text{e}^- \longrightarrow \text{Ni}(\text{s})$	-0.23
$\text{Co}^{2+}(\text{aq}) + 2 \text{e}^- \longrightarrow \text{Co}(\text{s})$	-0.28
$\text{PbSO}_4(\text{s}) + 2 \text{e}^- \longrightarrow \text{Pb}(\text{s}) + \text{SO}_4^{2-}(\text{aq})$	-0.36
$\text{Cd}^{2+}(\text{aq}) + 2 \text{e}^- \longrightarrow \text{Cd}(\text{s})$	-0.40
$\text{Fe}^{2+}(\text{aq}) + 2 \text{e}^- \longrightarrow \text{Fe}(\text{s})$	-0.45
$2 \text{CO}_2(\text{g}) + 2 \text{H}^+(\text{aq}) + 2 \text{e}^- \longrightarrow \text{H}_2\text{C}_2\text{O}_4(\text{aq})$	-0.49
$\text{Cr}^{3+}(\text{aq}) + \text{e}^- \longrightarrow \text{Cr}^{2+}(\text{aq})$	-0.50
$\text{Cr}^{3+}(\text{aq}) + 3 \text{e}^- \longrightarrow \text{Cr}(\text{s})$	-0.73
$\text{Zn}^{2+}(\text{aq}) + 2 \text{e}^- \longrightarrow \text{Zn}(\text{s})$	-0.76
$2 \text{H}_2\text{O}(\text{l}) + 2 \text{e}^- \longrightarrow \text{H}_2(\text{g}) + 2 \text{OH}^-(\text{aq})$	-0.83
$\text{Mn}^{2+}(\text{aq}) + 2 \text{e}^- \longrightarrow \text{Mn}(\text{s})$	-1.18
$\text{Al}^{3+}(\text{aq}) + 3 \text{e}^- \longrightarrow \text{Al}(\text{s})$	-1.66
$\text{H}_2(\text{g}) + 2 \text{e}^- \longrightarrow 2 \text{H}^-(\text{aq})$	-2.23

—Continued on the next page

Half-Reaction	$E^\circ(\text{V})$	Half-Reaction	$E^\circ(\text{V})$
$\text{Mg}^{2+}(\text{aq}) + 2 \text{e}^- \longrightarrow \text{Mg}(\text{s})$	-2.37	$\text{Ba}^{2+}(\text{aq}) + 2 \text{e}^- \longrightarrow \text{Ba}(\text{s})$	-2.90
$\text{La}^{3+}(\text{aq}) + 3 \text{e}^- \longrightarrow \text{La}(\text{s})$	-2.38	$\text{K}^+(\text{aq}) + \text{e}^- \longrightarrow \text{K}(\text{s})$	-2.92
$\text{Na}^+(\text{aq}) + \text{e}^- \longrightarrow \text{Na}(\text{s})$	-2.71	$\text{Li}^+(\text{aq}) + \text{e}^- \longrightarrow \text{Li}(\text{s})$	-3.04
$\text{Ca}^{2+}(\text{aq}) + 2 \text{e}^- \longrightarrow \text{Ca}(\text{s})$	-2.76		

E. Vapor Pressure of Water at Various Temperatures

$T(^{\circ}\text{C})$	$P(\text{torr})$	$T(^{\circ}\text{C})$	$P(\text{torr})$	$T(^{\circ}\text{C})$	$P(\text{torr})$	$T(^{\circ}\text{C})$	$P(\text{torr})$
0	4.58	21	18.65	35	42.2	92	567.0
5	6.54	22	19.83	40	55.3	94	610.9
10	9.21	23	21.07	45	71.9	96	657.6
12	10.52	24	22.38	50	92.5	98	707.3
14	11.99	25	23.76	55	118.0	100	760.0
16	13.63	26	25.21	60	149.4	102	815.9
17	14.53	27	26.74	65	187.5	104	875.1
18	15.48	28	28.35	70	233.7	106	937.9
19	16.48	29	30.04	80	355.1	108	1004.4
20	17.54	30	31.82	90	525.8	110	1074.6

APPENDIX III

Answers to Selected End-of-Chapter Problems

Chapter E

19. a. 0°C b. -321°
 c. -78.3° d. 310.2 K
21. -62.2°C , 210.9 K
23. a. 1.2 nm b. 22 fs c. 1.5 Gg d. 3.5 ML
25. a. $4.5 \times 10^{-9}\text{ s}$ b. $1.8 \times 10^{-14}\text{ s}$
 c. $1.28 \times 10^{-10}\text{ m}$ d. $3.5 \times 10^{-5}\text{ m}$

1245 kg	$1.245 \times 10^6\text{ g}$	$1.245 \times 10^9\text{ mg}$
515 km	$5.15 \times 10^6\text{ dm}$	$5.15 \times 10^7\text{ cm}$
122.355 s	$1.22355 \times 10^5\text{ ms}$	0.122355 ks
3.345 kJ	$3.345 \times 10^3\text{ J}$	$3.345 \times 10^6\text{ mJ}$

29. a. 254.998 km b. $2.54998 \times 10^{-1}\text{ Mm}$
 c. $254998 \times 10^3\text{ mm}$ d. $254998 \times 10^2\text{ cm}$
31. $10,000\text{ 1-cm squares}$
33. a. $1.50 \times 10^3\text{ mL}$ b. $1.50 \times 10^3\text{ cm}^3$
 c. 3.96 gal d. 15.9 qt
35. c
37. a. 73.0 mL b. 88.2°C c. 645 mL
39. a. 1,050,501 b. 0.0020
 c. 0.0000000000000002 d. 0.001090
41. a. 3
 b. ambiguous, without more information assume three significant figures
 c. 3
 d. 5
 e. ambiguous, without more information assume one significant figure
43. a. not exact b. exact
 c. not exact d. exact
45. a. 156.9 b. 156.8
 c. 156.8 d. 156.9
47. a. 1.84 b. 0.033
 c. 0.500 d. 34
49. a. 41.4 b. 133.5
 c. 73.0 d. 0.42
51. a. 391.3 b. 1.1×10^4
 c. 5.96 d. 5.93×10^4
53. no

55. 1.26 g/cm^3
57. a. 463 g
 b. 3.7 L
59. $201. \times 10^3\text{ g}$
61. a. $2.78 \times 10^4\text{ cm}^3$
 b. $1.898 \times 10^{-3}\text{ kg}$
 c. $1.98 \times 10^7\text{ cm}$
63. a. 60.6 in b. $3.14 \times 10^3\text{ g}$
 c. 3.7 qt d. 4.29 in
65. $5.0 \times 10^1\text{ min}$
67. $4.0 \times 10^1\text{ mi/gal}$
69. a. $1.95 \times 10^{-4}\text{ km}^2$
 b. $1.95 \times 10^4\text{ dm}^2$
 c. $1.95 \times 10^6\text{ cm}^2$
71. 0.680 mi^2
73. 0.95 mL
75. a. $1.92 \times 10^9\text{ J}$ b. 51.4 cal
 c. $2.37 \times 10^6\text{ J}$ d. 681 cal
77. a. $9.987 \times 10^6\text{ J}$ b. $9.987 \times 10^3\text{ kJ}$
 c. 2.78 kWh
79. $4.35 \times 10^9\text{ J}$
81. a. mass of can of gold = $1.9 \times 10^4\text{ g}$
 mass of can of sand = $3.0 \times 10^3\text{ g}$
 b. Yes, the thief sets off the trap because the can of sand is lighter than the gold cylinder.
83. 21 in^3
85. 7.6 g/cm^3
87. $3.11 \times 10^5\text{ lb}$
89. $3.3 \times 10^2\text{ km}$
91. 6.8×10^{-15}
93. $2.4 \times 10^{19}\text{ km}$
95. 488 g
97. $0.661\ \Omega$
99. 0.492
101. $V_n = 8.2 \times 10^{-8}\text{ pm}^3$, $V_a = 1.4 \times 10^6\text{ pm}^3$, $5.9 \times 10^{-12}\%$
103. $9 \times 10^1\text{ mg CO}$
105. 13%
107. 343 cubes
109. a. The dark block is denser.
 b. The lighter-colored block is denser.
 c. Relative densities cannot be determined.
114. a. 8.2%
 c. 24.4 million cubic kilometers

Chapter 1

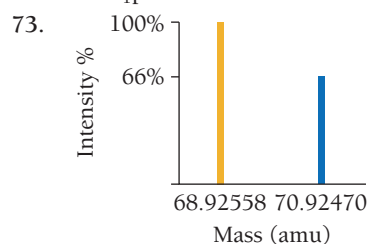
35. a. pure substance b. pure substance
c. homogeneous mixture d. heterogeneous mixture
37. a. homogeneous mixture
b. pure substance, compound
c. pure substance, element
d. heterogeneous mixture

39.

Substance	Pure or Mixture	Type
Aluminum	Pure	Element
Apple juice	Mixture	Homogeneous
Hydrogen peroxide	Pure	Compound
Chicken soup	Mixture	Heterogeneous

41. a. pure substance, compound
b. mixture, heterogeneous
c. mixture, homogeneous
d. pure substance, element
43. a. theory b. observation
c. law d. observation
45. Several answers are possible.
47. 13.5 g
49. These results are not consistent with the law of definite proportions because sample 1 is composed of 11.5 parts Cl to 1 part C and sample 2 is composed of 9.05 parts Cl to 1 part C. The law of definite proportions states that a given compound always contains exactly the same proportion of elements by mass.
51. 23.8 g
53. For the law of multiple proportions to hold, the ratio of the masses of O combining with 1 g of Os in the compound should be a small whole number. $0.3369/0.168 = 2.00$
55. Sample 1: 1.00 g O₂/1.00 g S;
Sample 2: 1.50 g O₂/1.00 g S
Sample 2/sample 1 = 1.50/1.00 = 1.50
3 O atoms/2 O atoms = 1.5
57. a. not consistent
b. consistent: Dalton's atomic theory states that the atoms of a given element are identical.
c. consistent: Dalton's atomic theory states that atoms combine in simple whole-number ratios to form compounds.
d. not consistent
59. a. consistent: Rutherford's nuclear model states that the atom is largely empty space.
b. consistent: Rutherford's nuclear model states that most of the atom's mass is concentrated in a tiny region called the nucleus.
c. not consistent
d. not consistent
61. -2.3×10^{-19} C
63. a, b, c
65. a. Ag-107 b. Ag-109
c. U-238 d. H-2


67. a. 7_1^1p and 7_1^0n b. 11_1^1p and 12_1^0n
c. 86_1^1p and 136_1^0n d. 82_1^1p and 126_1^0n
69. 6_1^1p and 8_1^0n , $^{14}_6\text{C}$
71. a. 28_1^1p and 26_1^{-}e b. 16_1^1p and 18_1^{-}e
c. 35_1^1p and 36_1^{-}e d. 24_1^1p and 21_1^{-}e

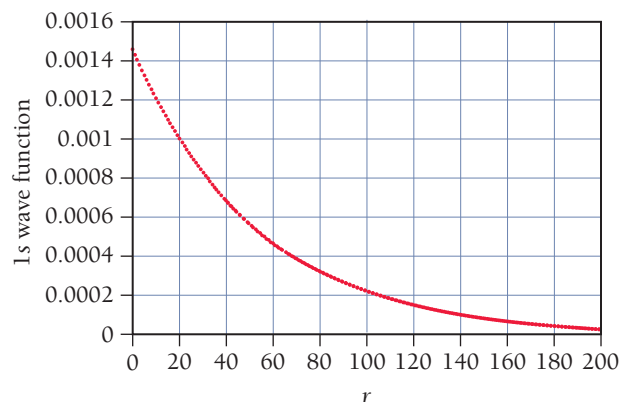


75. The fluorine-19 isotope must have a large percent abundance, which would make fluorine produce a large peak at this mass. Chlorine has two isotopes (Cl-35 and Cl-37). The atomic mass is simply the weighted average of these two, which means that there is no chlorine isotope with a mass of 35.45 amu.
77. 121.8 amu, Sb
79. Br-79 78.92 amu 50.96%
81. 152 amu
83. 3.32×10^{24} atoms
85. a. 0.295 mol Ar b. 0.0543 mol Zn
c. 0.144 mol Ta d. 0.0304 mol Li
87. 2.11×10^{22} atoms
89. a. 1.01×10^{23} atoms b. 6.78×10^{21} atoms
c. 5.39×10^{21} atoms d. 5.6×10^{20} atoms
91. a. 36 g b. 0.187 g
c. 62 g d. 3.1 g
93. 2.6×10^{21} atoms
95. 3.239×10^{-22} g
97. 1.50 g
99. 207 amu
101. ^{237}Pa , ^{238}U , ^{239}Np , ^{240}Pu , ^{235}Ac , ^{234}Ra , etc.
103. 6.0×10^{17} km
105. 4.76×10^{24} atoms
107. 75.0% gold
109. 2.4×10^{13} atoms
111. 106.91 amu
113. 0.423
115. 63.67 g/mol
117. 25.06 g/mol
119. 1×10^{78} atoms/universe
121. c
123. a. law b. theory
c. observation d. law
125. greatest number of moles: Cr, greatest mass: Zn
130. a. 2000, $0.24 \mu\text{g}/\text{m}^3$; 2014, $0.030 \mu\text{g}/\text{m}^3$
c. 2.9×10^8 atoms/cm³

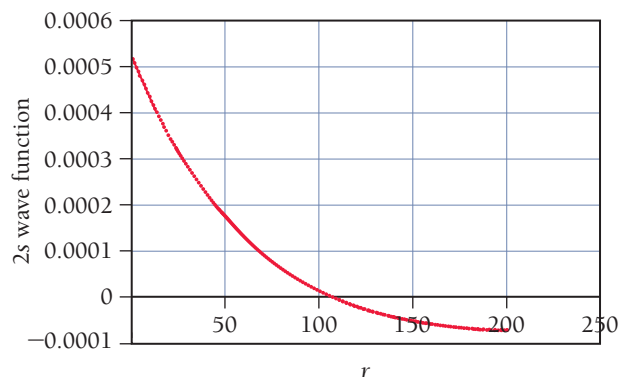
Chapter 2

35. 499 s
37. (i) d, c, b, a
(ii) a, b, c, d

39. a. 4.74×10^{14} Hz b. 5.96×10^{14} Hz
 c. 5.8×10^{18} Hz
41. a. 3.14×10^{-19} J b. 3.95×10^{-19} J
 c. 3.8×10^{-15} J
43. 1.03×10^{16} photons
45. a. 79.8 kJ/mol b. 239 kJ/mol
 c. 798 kJ/mol
47. 
49. 3.6×10^6 m/s
51. 5.39 nm
53. 1.1×10^{-34} m. The wavelength of a baseball is negligible with respect to its size.
55. $\Delta v = 1.04 \times 10^5$ m/s
57. 2s
59. a. $l = 0$ b. $l = 0, 1$
 c. $l = 0, 1, 2$ d. $l = 0, 1, 2, 3$
61. c
63. See Figures 7.25 and 7.26. The 2s and 3p orbitals would, on average, be farther from the nucleus and have more nodes than the 1s and 2p orbitals.
65. $n = 1$
67. $2p \longrightarrow 1s$
69. a. 122 nm, UV b. 103 nm, UV
 c. 486 nm, visible d. 434 nm, visible
71. $n = 2$
73. 344 nm
75. 6.4×10^{17} photons/s
77. 0.0547 nm
79. 91.2 nm
81. a. 4 b. 9 c. 16
83. $n = 4 \longrightarrow n = 3, n = 5 \longrightarrow n = 3,$
 $n = 6 \longrightarrow n = 3$, respectively
85. $4.84 \times 10^{14} \text{ s}^{-1}$
87. 11 m
89. 6.78×10^{-3} J
91. 632 nm
93. a. $E_1 = 2.51 \times 10^{-18}$ J, $E_2 = 1.00 \times 10^{-17}$ J,
 $E_3 = 2.26 \times 10^{-17}$ J
 b. 26.5 nm, UV; 15.8 nm, UV
95. 1s:



2s:

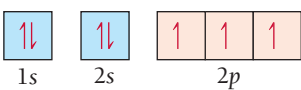
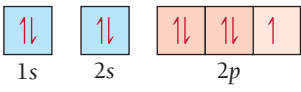
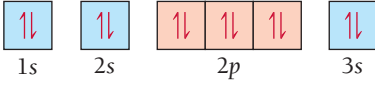
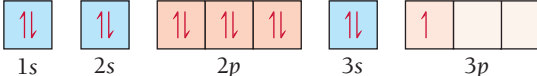


The plot for the 2s wave function extends below the x-axis. The x-intercept represents the radial node of the orbital.

97. 7.39×10^5 m/s
99. $\Delta E = 1.1 \times 10^{-20}$ J, 7.0×10^2 nm
101. 11 m
103. In the Bohr model, electrons exist in specific orbits encircling the atom. In the quantum-mechanical model, electrons exist in orbitals that are really probability density maps of where the electron is likely to be found. The Bohr model is inconsistent with Heisenberg's uncertainty principle.
105. a. yes b. no c. yes d. no
112. a. 5.93×10^{-19} J
 c. 2-EHMC
 e. 1.4×10^7 J

Chapter 3

41. a. potassium, metal
 b. barium, metal
 c. iodine, nonmetal
 d. oxygen, nonmetal
 e. antimony, metalloid
43. a and b are main-group elements.
45. a. $1s^2 2s^2 2p^6 3s^2 3p^2$
 b. $1s^2 2s^2 2p^4$
 c. $1s^2 2s^2 2p^6 3s^2 3p^6 4s^1$
 d. $1s^2 2s^2 2p^6$

47. a. 
- b. 
- c. 
- d. 

49. a. $[\text{Ne}]3s^23p^3$ b. $[\text{Ar}]4s^23d^{10}4p^2$
c. $[\text{Kr}]5s^24d^2$ d. $[\text{Kr}]5s^24d^{10}5p^5$
51. a. 1 b. 10 c. 5 d. 2
53. a. V, As b. Se c. V d. Kr
55. a. 2 b. 1 c. 10 d. 6
57. reactive metal: a, reactive nonmetal: c
59. a. 1 valence electron, alkali metal
b. 7 valence electrons, halogen
c. 2 valence electrons, alkaline earth metal
d. 2 valence electrons, alkaline earth metal
e. 8 valence electrons, noble gas
61. Cl and F because they are in the same group or family. Elements in the same group or family have similar chemical properties.
63. a. $2- [\text{Ne}]$ b. $1+ [\text{Ar}]$
c. $3+ [\text{Ne}]$ d. $1+ [\text{Kr}]$
65. c
67. The valence electrons of nitrogen will experience a greater effective nuclear charge. The valence electrons of both atoms are screened by two core electrons, but N has a greater number of protons and therefore a greater net nuclear charge.
69. a. $1+$ b. $2+$ c. $6+$ d. $4+$
71. a. In b. Si c. Pb d. C
73. F, S, Si, Ge, Ca, Rb
75. a. $[\text{Ne}]$ b. $[\text{Kr}]$ c. $[\text{Kr}]$
d. $[\text{Ar}]3d^6$ e. $[\text{Ar}] 3d^9$
77. a. $[\text{Ar}]$ Diamagnetic
b. $[\text{Ar}]$

1	1	1			
---	---	---	--	--	--

 Paramagnetic
 $3d$
c. $[\text{Ar}]$

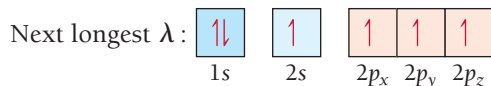
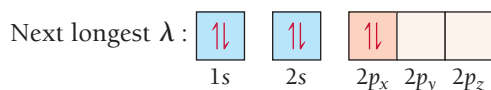
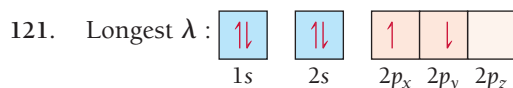
↑↓	↑↓	↑↓	↑	↑	
----	----	----	---	---	--

 Paramagnetic
 $3d$
d. $[\text{Ar}]$

1	1	1	1	1	
---	---	---	---	---	--

 Paramagnetic
 $3d$
79. a. Li b. I^- c. Cr d. O^{2-}
81. O^{2-} , F^- , Na^+ , Mg^{2+}
83. a. Br b. Na
c. cannot tell based on periodic trends d. P
85. In, Si, N, F
87. a. second and third b. fifth and sixth
c. sixth and seventh d. first and second
89. a. Na b. S c. C d. F
91. a. Sr b. Bi
c. cannot tell based on periodic trends d. As
93. S, Se, Sb, In, Ba, Fr
95. Br: $1s^22s^22p^63s^23p^64s^23d^{10}4p^5$
Kr: $1s^22s^22p^63s^23p^64s^23d^{10}4p^6$
Krypton's outer electron shell is filled, giving it chemical stability. Bromine is missing an electron from its outer shell and subsequently has a high electron affinity. Bromine tends to be easily reduced by gaining an electron, giving the bromide

- ion stability due to the filled p subshell, which corresponds to krypton's chemically stable electron configuration.
97. V: $[\text{Ar}]4s^23d^3$
 V^{3+} : $[\text{Ar}] 3d^2$
Both V and V^{3+} contain unpaired electrons in their $3d$ orbitals.
99. A substitute for K^+ would need to exhibit a $1+$ electric charge and have similar mass and atomic radius. Na^+ or Rb^+ might be good substitutes, but their radii are significantly smaller and larger, respectively. Based on mass, Ca^+ and Ar^+ are the closest to K^+ . Because the first ionization energy of Ca^+ is closest to that of K^+ , Ca^+ might be a good choice for a substitute. The difficulty lies in Ca's low second ionization energy, making it easily oxidized to form Ca^{2+} .
101. Si, Ge
103. a. N: $[\text{He}]2s^22p^3$, Mg: $[\text{Ne}]3s^2$, O: $[\text{He}]2s^22p^4$,
F: $[\text{He}]2s^22p^5$, Al: $[\text{Ne}]3s^23p^1$
b. Mg, Al, O, F, N
c. Al, Mg, O, N, F
d. Aluminum's first ionization energy is lower than Mg because its $3p$ electron is shielded by the $3s$ orbital. Oxygen's first ionization energy is lower than that of N because its fourth $2p$ electron experiences electron–electron repulsion by the other electron in its orbital.
105. For main-group elements, atomic radii decrease across a period because the addition of a proton in the nucleus and an electron in the outermost energy level increases Z_{eff} . This does not happen in the transition metals because the electrons are added to the $n_{\text{highest}-1}$ orbital and the Z_{eff} stays roughly the same.
107. Noble gases are exceptionally unreactive due to the stability of their completely filled outer quantum levels and their high ionization energies. The ionization energies of Kr, Xe, and Rn are low enough to form some compounds.
109. 6A: ns^2np^4 , 7A: ns^2np^5 , group 7A elements require only one electron to achieve a noble gas configuration. Since group 6A elements require two electrons, their affinity for one electron is less negative because one electron will merely give them an np^5 configuration.
111. 85
113. a. One If By Land (O, Ne, I, F, B, Y, La, Nd)
b. Atoms Are Fun (N, U, Fe, Ra, S, Mo, Ta backwards)
115. $1.390 \times 10^3 \text{ kJ/mol}$, 86.14 nm
117. a. $d_{\text{Ar}} \approx 2 \text{ g/L}$, $d_{\text{Xe}} \approx 6.5 \text{ g/L}$
b. $d_{118} \approx 13 \text{ g/L}$
c. mass = $3.35 \times 10^{-23} \text{ g/Ne atom}$, density of Ne atom = $2.3 \times 10^4 \text{ g/L}$. The separation of Ne atoms relative to their size is immense.
d. Kr: $2.69 \times 10^{22} \text{ atoms/L}$, Ne: $2.69 \times 10^{22} \text{ atoms/L}$. It seems Ar will also have $2.69 \times 10^{22} \text{ atoms/L}$.
 $d_{\text{Ar}} = 1.78 \text{ g/L}$. This corresponds to accepted values.
119. Density increases to the right because, though electrons are added successively across the period, they are added to the $3d$ subshell, which is not a part of the outermost principal energy level. As a result, the atomic radius does not increase significantly across the period while mass does.



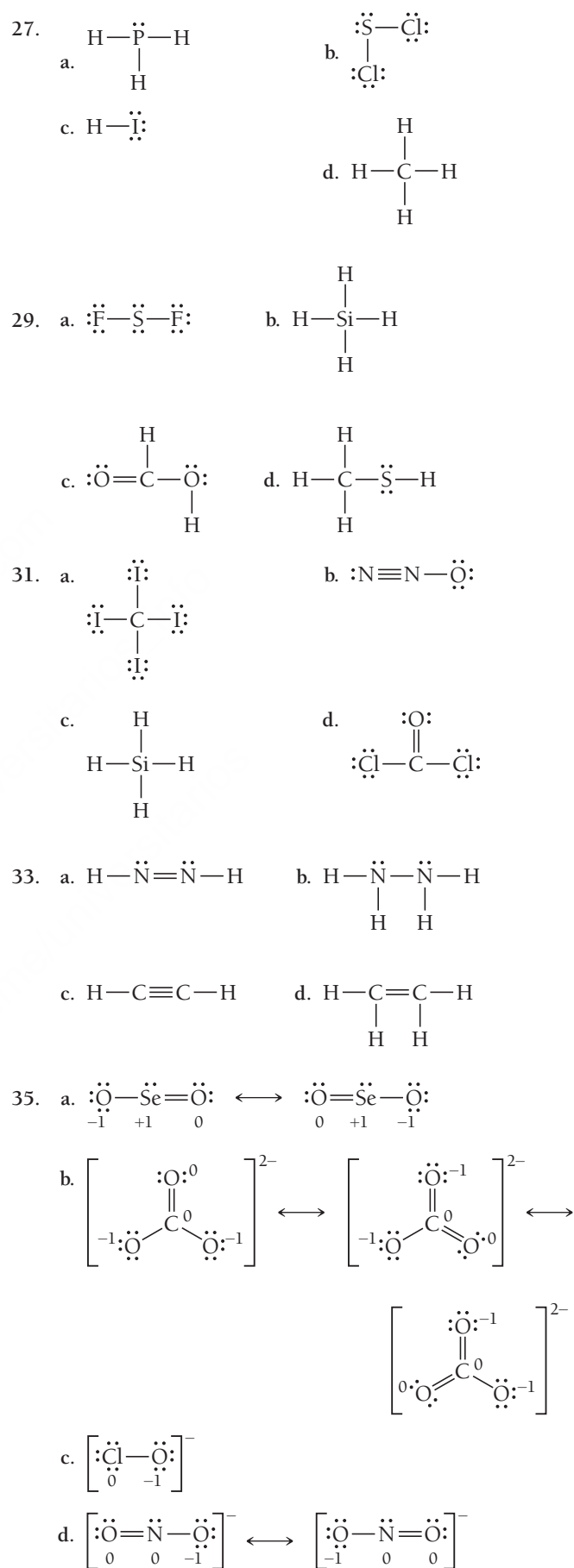
123. 168, noble gas
125. A relatively high effective nuclear charge is found in gallium with its completed $3d$ subshell and in thallium with its completed $4f$ subshell, accounting for the relatively high first ionization energies of these elements.
127. The second electron affinity requires the addition of an electron to something that is already negatively charged. The monoanions of both of these elements have relatively high electron density in a relatively small volume. As we shall see in Chapter 9, the dianions of these elements do exist in many compounds because they are stabilized by chemical bonding.
129. 120, 170
131. a. any group 6A element
b. any group 5A element
c. any group 1A element
133. a. true b. true
c. false d. true
135. Since Ca has valence electrons of $4s^2$, it has a relatively low ionization energy to lose 2 electrons. In contrast, F has a highly exothermic electron affinity when gaining 1 electron, but not a second electron because of its $2s^2 2p^5$ valence electrons. Therefore, calcium and fluoride combine in a 2:1 ratio.
141. a. First ionization energy generally increases as you move from left to right across period 3 because effective nuclear charge increases from left to right.
b. Electron affinity generally decreases (becomes more exothermic) from left to right across period 3 because effective nuclear charge increases from left to right.
c. The overall energy change is approximately 150 kJ/mol. The exchange is endothermic.

Chapter 4

29. a. molecular b. ionic
c. ionic d. molecular
31. a. NO_2 b. C_3H_{12} c. C_2H_5
33. a. 3 Mg, 2 P, 8 O b. 1 Ba, 2 Cl
c. 1 Fe, 2 N, 4 O d. 1 Ca, 2 O, 2 H
35. a. NH_3 b. C_2H_6 c. SO_3
37. $1s^2 2s^2 2p^3 \cdot \dot{\text{N}}:$
39. a. $\cdot \dot{\text{Al}} \cdot$ b. Na^+
c. $:\ddot{\text{Cl}}:$ d. $[\ddot{\text{Cl}}:]^-$

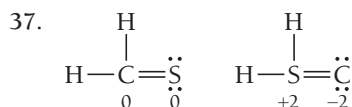
41. a. $\text{Na}^+ [\ddot{\text{F}}:]^-$ b. $\text{Ca}^{2+} [\ddot{\text{O}}:]^{2-}$
c. $\text{Sr}^{2+} 2 [\ddot{\text{Br}}:]^-$ d. $2 \text{K}^+ [\ddot{\text{O}}:]^{2-}$
43. a. SrSe b. BaCl_2
c. Na_2S d. Al_2O_3
45. One factor of lattice energy is the product of the charges of the two ions. The product of the ion charges for CsF is +1, while that for BaO is +4. Because this product is four times greater, the lattice energy is also four times greater.
47. a. CaO b. ZnS
c. RbBr d. Al_2O_3
49. a. $\text{Ca}(\text{OH})_2$ b. CaCrO_4
c. $\text{Ca}_3(\text{PO}_4)_2$ d. $\text{Ca}(\text{CN})_2$
51. a. magnesium nitride b. potassium fluoride
c. sodium oxide d. lithium sulfide
e. cesium fluoride f. potassium iodide
53. a. tin(II) oxide b. chromium(III) sulfide
c. rubidium iodide d. barium bromide
55. a. copper(I) nitrite b. magnesium acetate
c. barium nitrate d. lead(II) acetate
57. a. NaHSO_3 b. LiMnO_4
c. AgNO_3 d. K_2SO_4
e. RbHSO_4 f. KHCO_3
59. a. cobalt(II) sulfate heptahydrate
b. $\text{IrBr}_3 \cdot 4 \text{H}_2\text{O}$
c. Magnesium bromate hexahydrate
d. $\text{K}_2\text{CO}_3 \cdot 2 \text{H}_2\text{O}$
61. a. $\text{H}:\text{H}$, filled duets b. $:\ddot{\text{Cl}}:\ddot{\text{Cl}}:$, filled octets
c. $\ddot{\text{O}}=\ddot{\text{O}}$, filled octets d. $:\text{N}\equiv\text{N}:$, filled octets
63. a. carbon monoxide b. nitrogen triiodide
c. silicon tetrachloride d. tetranitrogen tetraselenide
65. a. PCl_3 b. ClO c. S_2F_4 d. PF_5
67. a. strontium chloride b. tin(IV) oxide
c. diphosphorus pentasulfide
69. a. potassium chlorate b. diiodine pentoxide
c. lead(II) sulfate
71. a. 46.01 amu b. 58.12 amu
c. 180.16 amu d. 238.03 amu
73. a. 0.471 mol b. 0.0362 mol
c. 968 mol d. 0.279 mol
75. a. 0.554 mol b. 28.4 mol
c. 0.378 mol d. 1093 mol
77. a. 2.2×10^{23} molecules b. 7.06×10^{23} molecules
c. 4.16×10^{23} molecules d. 1.09×10^{23} molecules
79. a. 0.0790 g b. 0.84 g c. 2.992×10^{-22} g
81. 0.10 mg
83. a. 74.87% C b. 79.88% C c. 92.24% C d. 37.23% C
85. NH_3 : 82.27% N
 $\text{CO}(\text{NH}_2)_2$: 46.65% N
 NH_4NO_3 : 35.00% N
 $(\text{NH}_4)_2\text{SO}_4$: 21.20% N
 NH_3 has the highest N content.
87. 20.8 g F

89. 196 μg KI
91. a. 2 : 1 b. 4 : 1 c. 6 : 2 : 1
93. a. 0.885 mol H b. 5.2 mol H
c. 29 mol H d. 33.7 mol H
95. a. 3.3 g Na b. 3.6 g Na
c. 1.4 g Na d. 1.7 g Na
97. a. Ag_2O b. $\text{Co}_3\text{As}_2\text{O}_8$ c. SeBr_4
99. a. $\text{C}_5\text{H}_7\text{N}$ b. $\text{C}_4\text{H}_5\text{N}_2\text{O}$
101. $\text{C}_{13}\text{H}_{18}\text{O}_2$
103. NCl_3
105. a. $\text{C}_{12}\text{H}_{14}\text{N}_2$ b. $\text{C}_6\text{H}_3\text{Cl}_3$ c. $\text{C}_{10}\text{H}_{20}\text{N}_2\text{S}_4$
107. CH_2
109. $\text{C}_2\text{H}_4\text{O}$
111. a. inorganic b. organic
c. organic d. inorganic
113. a. functionalized hydrocarbon, alcohol
b. hydrocarbon
c. functionalized hydrocarbon, ketone
d. functionalized hydrocarbon, amine
115. 1.50×10^{24} molecules EtOH
117. a. K_2CrO_4 , 40.27, K, 26.78, Cr, 32.95, O
b. $\text{Pb}_3(\text{PO}_4)_2$, 76.60, Pb, 7.63, P, 15.77, O
c. CoBr_2 , 26.94, Co, 73.06, Br
119. 1.80×10^2 g Cl/yr
121. M = Fe
123. estradiol = $\text{C}_{18}\text{H}_{24}\text{O}_2$
125. $\text{C}_{18}\text{H}_{20}\text{O}_2$
127. 7 H_2O
129. $\text{C}_6\text{H}_9\text{BrO}$
131. 1.87×10^{21} atoms
133. 92.93 amu
135. $x = 1, y = 2$
137. 41.7 mg
139. 0.224 g
141. 22.0% by mass
143. 1.6×10^7 kg Cl
145. 7.8×10^3 kg rock
147. $\text{C}_5\text{H}_{10}\text{SI}$
149. X_3Y_2
151. The sphere in the molecular models represents the electron cloud of the atom. On this scale, the nucleus would be too small to see.
153. The statement is incorrect because a chemical formula is based on the ratio of atoms combined, not the ratio of grams combined. The statement should read: "The chemical formula for ammonia (NH_3) indicates that ammonia contains three hydrogen atoms to each nitrogen atom."
159. a. 110 ppmv b. 2.0×10^6 km³ c. 437 ppmv



Chapter 5

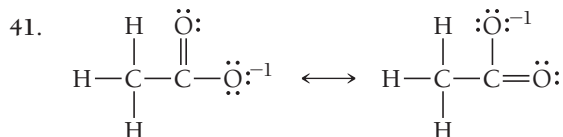
23. a. pure covalent b. polar covalent
c. pure covalent d. ionic bond
25. $\text{:C}\equiv\text{O:}$, 25%



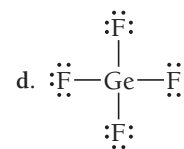
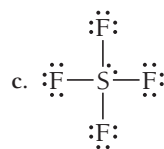
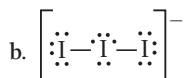
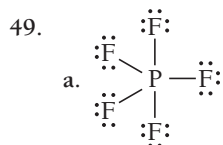
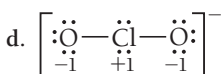
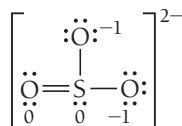
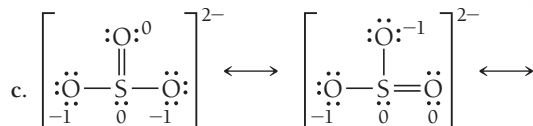
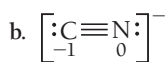
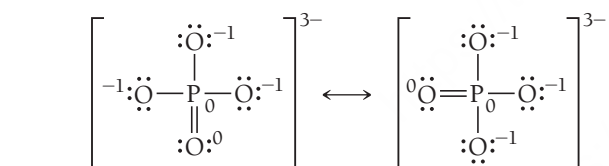
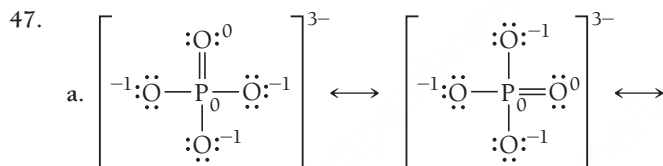
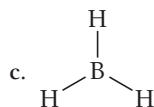
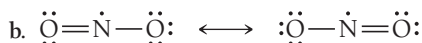
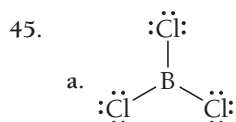
H_2CS is the better structure.



does not provide a significant contribution to the resonance hybrid as it has a +1 formal charge on a very electronegative atom (oxygen).



43. N has a formal charge of +1; O has a formal charge of -1.



51. H_3CCH_3 , H_2CCH_2 , HCCH

53. 4

55. a. 4 e^- groups, 4 bonding groups, 0 lone pair

b. 5 e^- groups, 3 bonding groups, 2 lone pairs

c. 6 e^- groups, 5 bonding groups, 1 lone pair

57. a. e^- geometry: tetrahedral

molecular geometry: trigonal pyramidal

idealized bond angle: 109.5° , deviation

b. e^- geometry: tetrahedral

molecular geometry: bent

idealized bond angle: 109.5° , deviation

c. e^- geometry: tetrahedral

molecular geometry: tetrahedral

idealized bond angle: 109.5° , deviation (due to large size of Cl compared to H)

d. e^- geometry: linear

molecular geometry: linear

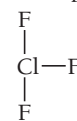
idealized bond angle: 180°

59. H_2O has a smaller bond angle due to lone pair-lone pair repulsions, the strongest electron group repulsion.

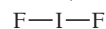
61. a. seesaw,



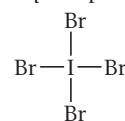
b. T-shape,



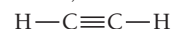
c. linear,



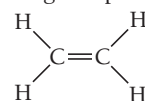
d. square planar,



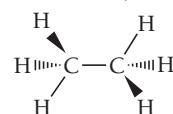
63. a. linear,



b. Trigonal planar,



c. tetrahedral,

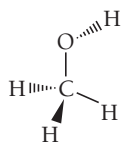


65. a. The lone pair will cause lone pair-bonding pair repulsions, pushing the three bonding pairs out of the same plane. The correct molecular geometry is trigonal pyramidal.

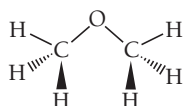
b. The lone pair should take an equatorial position to minimize 90° bonding pair interactions. The correct molecular geometry is seesaw.

c. The lone pairs should take positions on opposite sides of the central atom to reduce lone pair-lone pair interactions. The correct molecular geometry is square planar.

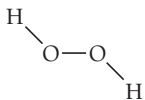
67. a. C: tetrahedral
O: bent



- b. C's: tetrahedral
O: bent



- c. O's: bent



69. The vectors of the polar bonds in both CO_2 and CCl_4 oppose each other with equal magnitude and sum to 0.

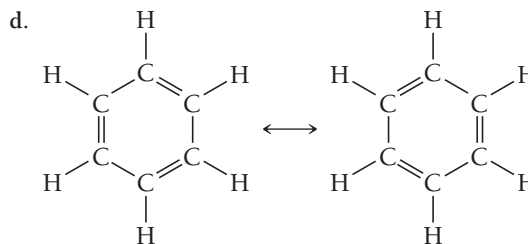
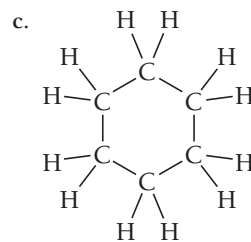
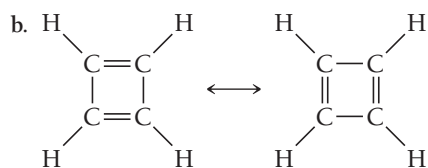
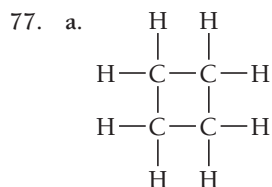
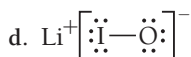
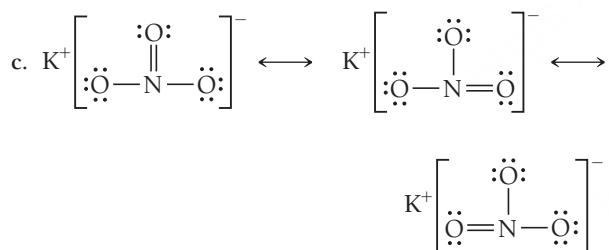
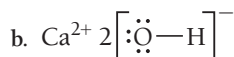
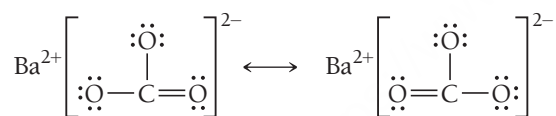
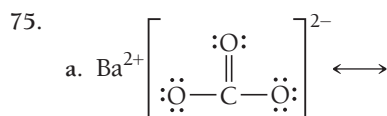
71. PF_3 , polar

SBr_2 , slightly polar or nonpolar

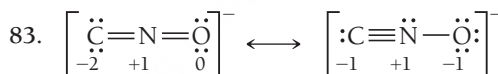
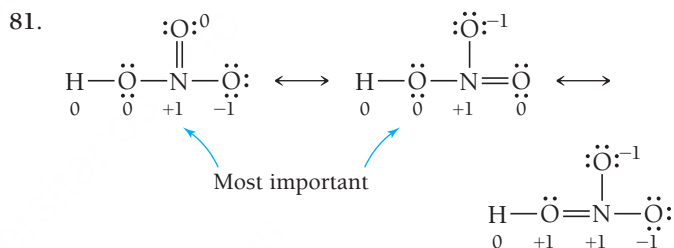
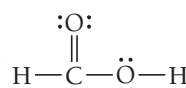
CHCl_3 , polar

CS_2 , nonpolar

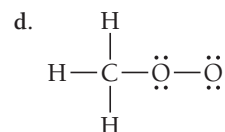
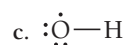
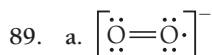
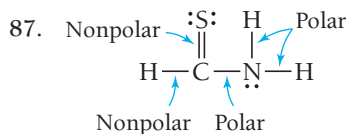
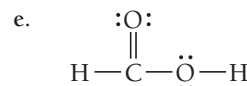
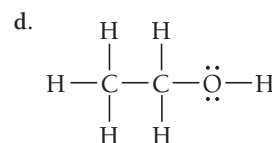
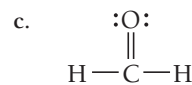
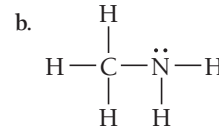
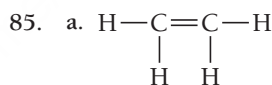
73. a. polar b. polar c. polar d. nonpolar

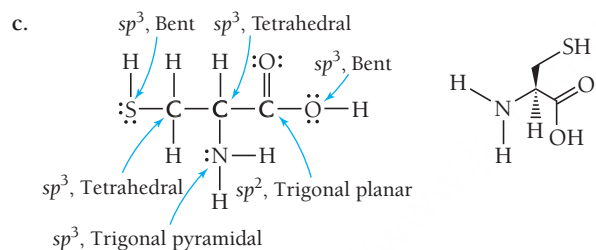
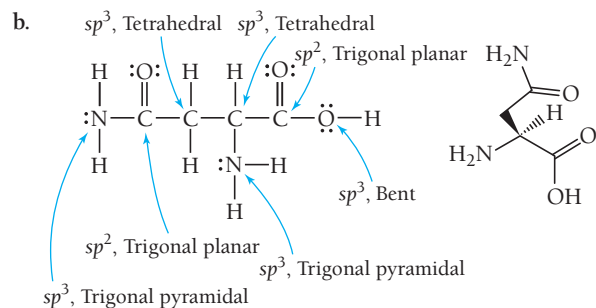
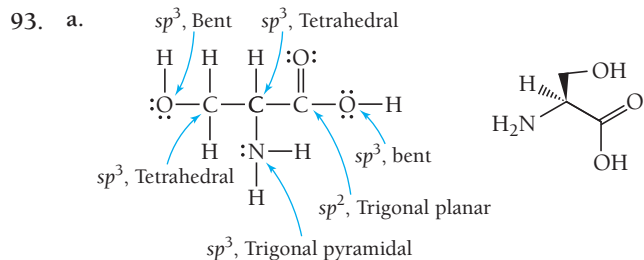


79. CH_2O_2 ,

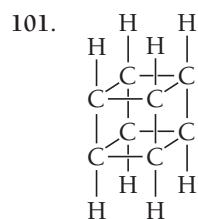
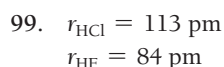
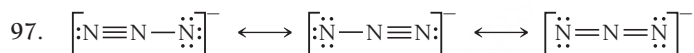


The fulminate ion is less stable because nitrogen is more electronegative than carbon and should therefore be terminal to accommodate the negative formal charge.



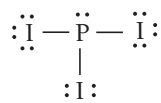
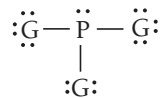
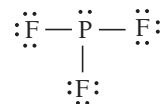
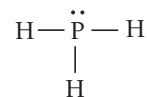
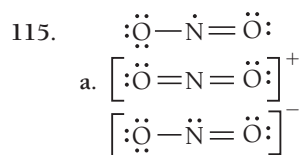


95. a. water soluble
b. fat soluble
c. water soluble
d. fat soluble



103. The bond angle for the nitrogen closest to the C atom should be bent. The bond angle for the nitrogen closest to the terminal nitrogen should be linear. The nitrogen nitrogen bond closest to the terminal nitrogen atom should be shorter than the other nitrogen nitrogen bond (due to resonance).

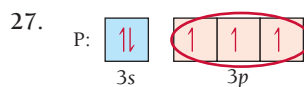
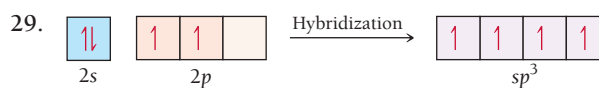
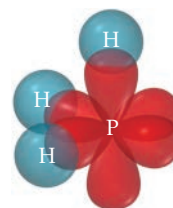
105. a. This is the best.
b. This statement is similar to a. but leaves out nonbonding lone-pair electron groups.
c. Molecular geometries are not determined by overlapping orbitals, but rather by the number and type of electron groups around each central atom.



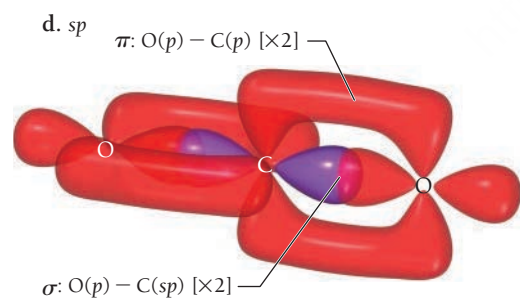
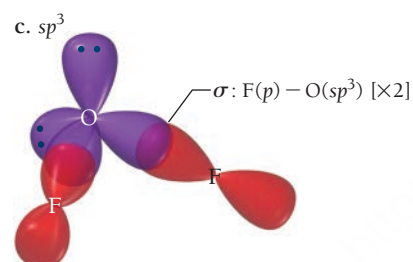
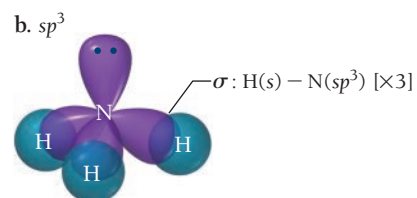
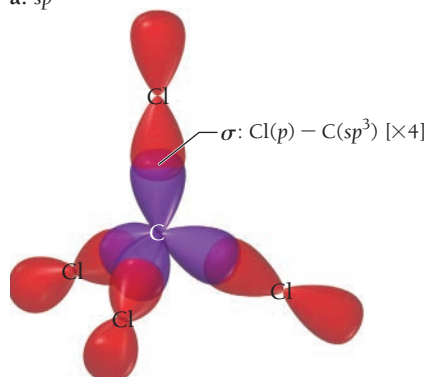
- e. The Lewis structures all have four electron groups, one lone pair, and three bonding groups. Based on VESPR, each of these molecules should have a bond angle of slightly less than 109.5° . However, the atomic radius increases in the following order: $\text{H} < \text{F} < \text{Cl} < \text{I}$. The increasing radius from H to I can explain the increasing bond angle in these compounds.

Chapter 6

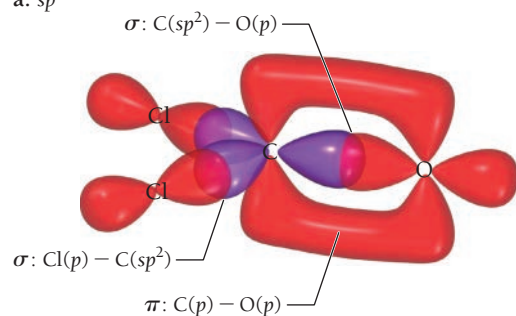
25. a. 0
b. 3
c. 1

Expected bond angle = 90° Valence bond theory is compatible with experimentally determined bond angle of 93.3° without hybrid orbitals.

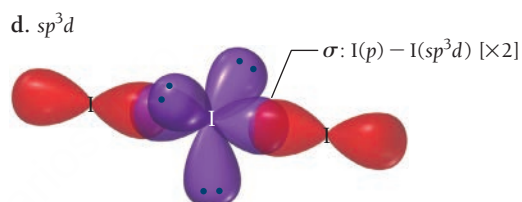
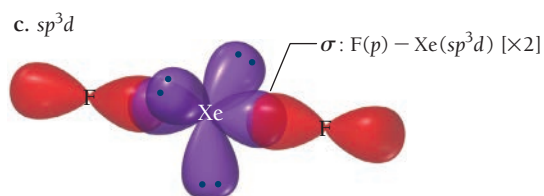
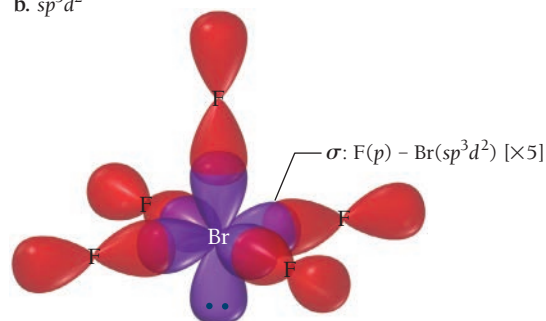
31. sp^2
33. a. sp^3



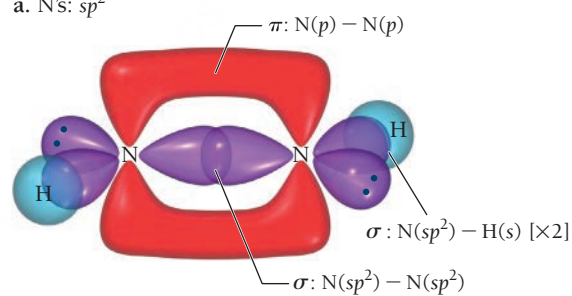
35. a. sp^2



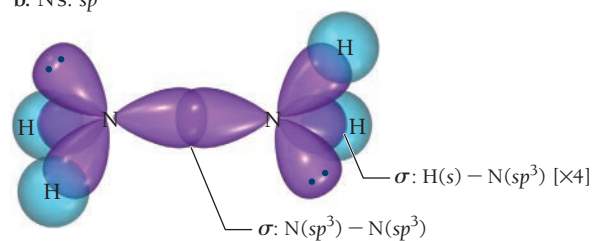
- b. sp^3d^2



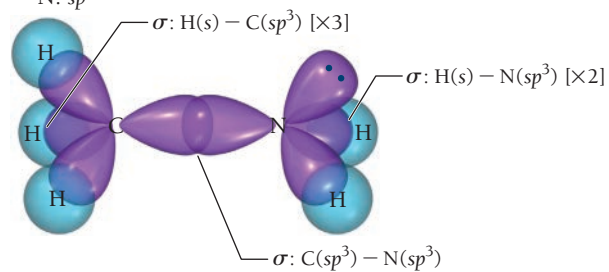
37. a. N's: sp^2

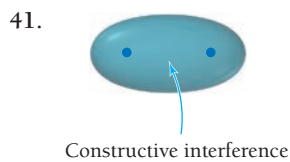
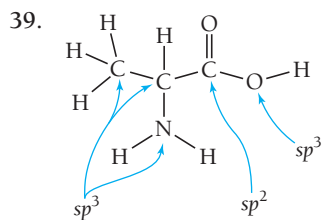


- b. N's: sp^3

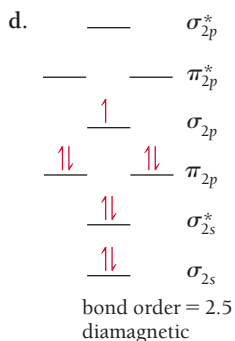
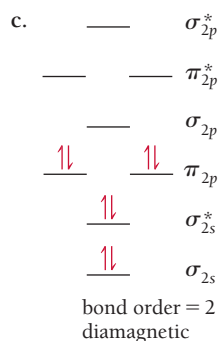
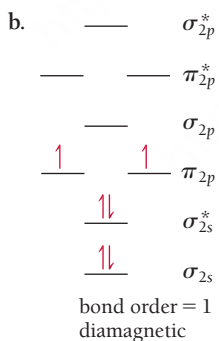
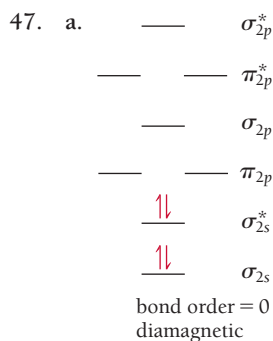
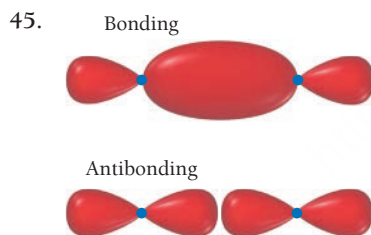


- c. C: sp^3
N: sp^3



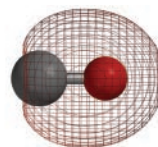
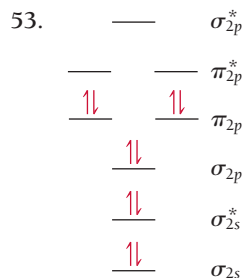


bond order $\text{Be}_2^+ = 1/2$
bond order $\text{Be}_2^- = 1/2$
Both will exist in the gas phase.

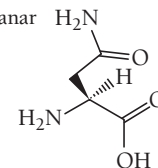
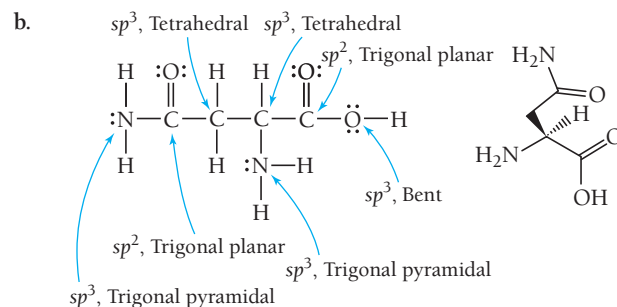
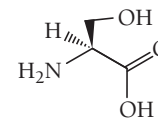
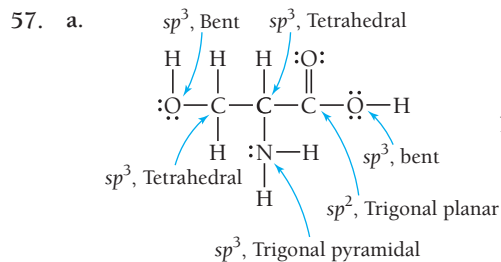
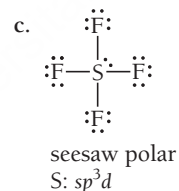
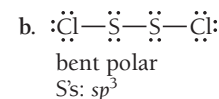
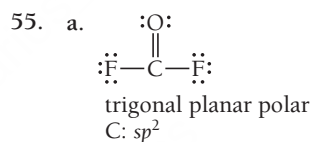


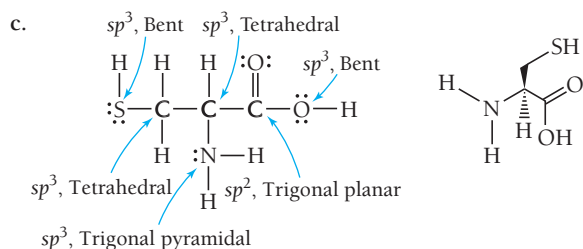
49. a. not stable
c. stable
- b. not stable
d. not stable

51. C_2^- has the highest bond order, the highest bond energy, and the shortest bond length.

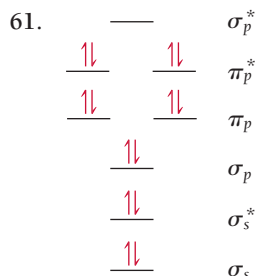


bond order = 3





59. σ bonds: 25
 π bonds: 4
lone pairs: on O's and N (without methyl group): sp^2 orbitals
on N's (with methyl group): sp^3 orbitals

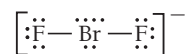


bond order = 1

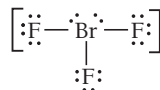
63. BrF, unhybridized, linear



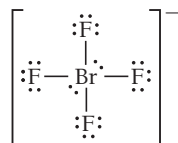
BrF_2^- has two bonds and three lone pairs on the central atom. The hybridization is sp^3d . The electron geometry is trigonal bipyramidal, with the three lone pairs equatorial. The molecular geometry is linear.



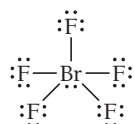
BrF_3 has three bonds and two lone pairs on the central atom. The hybridization is sp^3d . The electron geometry is trigonal bipyramidal, with the two lone pairs equatorial. The molecular geometry is T-shaped.



BrF_4^- has four bonds and two lone pairs on the central atom. The hybridization is sp^3d^2 . The electron geometry is octahedral, with the two lone pairs on the same axis. The molecular geometry is square planar.

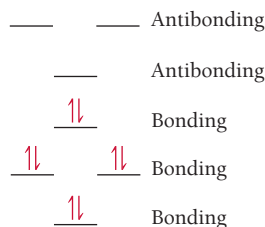


BrF_5 has five bonds and one lone pair on the central atom. The hybridization is sp^3d^2 . The electron geometry is octahedral. The molecular geometry is square pyramidal.



65. a. 10 b. 14 c. 2
67. According to valence bond theory, CH_4 , NH_3 , and H_2O are all sp^3 hybridized. This hybridization results in a tetrahedral electron group configuration with a 109.5° bond angle. NH_3 and H_2O deviate from this idealized bond angle because their lone electron pairs exist in their own sp^3 orbitals. The presence of lone pairs lowers the tendency for the central atom's orbitals to hybridize. As a result, as lone pairs are added, the bond angle moves further from the 109.5° hybrid angle and closer to the 90° unhybridized angle.

69. NH_3 is stable due to its bond order of 3.



71. In addition to the 2s and the three 2p orbitals, one more orbital is required to make 5 hybrid orbitals. The closest in energy is the 3s orbital. So the hybridization is s^2p^3 . VSEPR predicts trigonal bipyramidal geometry for five identical substituents.
73. Lewis theory defines a single bond, double bond, and triple bond as a sharing of two electrons, four electrons, and six electrons, respectively, between two atoms. Valence bond theory defines a single bond as a sigma overlap of two orbitals, a double bond as a single sigma bond combined with a pi bond, and a triple bond as a double bond with an additional pi bond. Molecular orbital theory defines a single bond, double bond, and triple bond as a bond order of 1, 2, or 3, respectively, between two atoms.
75. According to valence bond theory, the bonds in each of these halide molecules result from overlap of atomic orbitals. Smaller atoms (Cl is the smallest atom and I is the largest atom) have smaller atomic orbitals, and hence, shorter bonds. The shorter the bond, the higher the bond energy.
79. a. 1.31×10^3 b. 379 kJ/mol

Chapter 7

15. a. chemical b. physical
c. chemical d. chemical
17. a. physical b. chemical
c. physical
19. physical, chemical, physical, physical, physical
21. a. chemical b. physical
c. physical d. chemical
23. $2 \text{SO}_2(\text{g}) + \text{O}_2(\text{g}) + 2 \text{H}_2\text{O}(\text{l}) \longrightarrow 2 \text{H}_2\text{SO}_4(\text{aq})$
25. $2 \text{Na}(\text{s}) + 2 \text{H}_2\text{O}(\text{l}) \longrightarrow \text{H}_2(\text{g}) + 2 \text{NaOH}(\text{aq})$
27. $\text{C}_{12}\text{H}_{22}\text{O}_{11}(\text{s}) + \text{H}_2\text{O}(\text{l}) \longrightarrow 4 \text{C}_2\text{H}_5\text{OH}(\text{aq}) + 4 \text{CO}_2(\text{g})$
29. a. $\text{PbS}(\text{s}) + 2 \text{HBr}(\text{aq}) \longrightarrow \text{PbBr}_2(\text{s}) + \text{H}_2\text{S}(\text{g})$
b. $\text{CO}(\text{g}) + 3 \text{H}_2(\text{g}) \longrightarrow \text{CH}_4(\text{g}) + \text{H}_2\text{O}(\text{l})$
c. $4 \text{HCl}(\text{aq}) + \text{MnO}_2(\text{s}) \longrightarrow \text{MnCl}_2(\text{aq}) + 2 \text{H}_2\text{O}(\text{l}) + \text{Cl}_2(\text{g})$
d. $\text{C}_5\text{H}_{12}(\text{l}) + 8 \text{O}_2(\text{g}) \longrightarrow 5 \text{CO}_2(\text{g}) + 6 \text{H}_2\text{O}(\text{g})$

31. $\text{Na}_2\text{CO}_3(aq) + \text{CuCl}_2(aq) \longrightarrow \text{CuCO}_3(s) + 2 \text{NaCl}(aq)$
 33. a. $2 \text{CO}_2(g) + \text{CaSiO}_3(s) + \text{H}_2\text{O}(l) \longrightarrow \text{SiO}_2(s) + \text{Ca}(\text{HCO}_3)_2(aq)$
 b. $2 \text{Co}(\text{NO}_3)_3(aq) + 3 (\text{NH}_4)_2\text{S}(aq) \longrightarrow \text{Co}_2\text{S}_3(s) + 6 \text{NH}_4\text{NO}_3(aq)$
 c. $\text{Cu}_2\text{O}(s) + \text{C}(s) \longrightarrow 2 \text{Cu}(s) + \text{CO}(g)$
 d. $\text{H}_2(g) + \text{Cl}_2(g) \longrightarrow 2 \text{HCl}(g)$
 35. $2 \text{C}_6\text{H}_{14}(g) + 19 \text{O}_2(g) \longrightarrow 12 \text{CO}_2(g) + 14 \text{H}_2\text{O}(g), 68 \text{ mol O}_2$
 37. a. 5.0 mol NO_2 b. 14 mol NO_2
 c. 0.281 mol NO_2 d. 53.1 mol NO_2

39.

mol SiO_2	mol C	mol SiC	mol CO
3	9	3	6
2	6	2	4
5	15	5	10
2.8	8.4	2.8	5.6
0.517	1.55	0.517	1.03

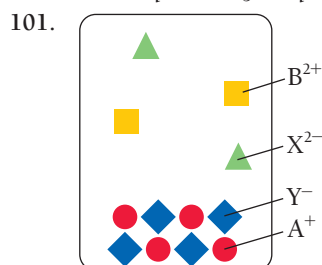
41. a. 9.3 g HBr, 0.12 g H_2
 43. a. 5.56 g BaCl_2 b. 6.55 g CaCO_3
 c. 6.09 g MgO d. 6.93 g Al_2O_3
 45. a. Na b. Na c. Br_2 d. Na
 47. 3 molecules Cl_2
 49. a. 2 mol b. 7 mol c. 9.40 mol
 51. 0.5 mol O_2
 53. a. 2.5 g b. 31.1 g c. 1.16 g
 55. 2.91 grams CO_2 remaining
 57. limiting reactant: Pb^{2+} , theoretical yield: 34.5 g PbCl_2 , percent yield: 85.3%
 59. limiting reactant: NH_3 , theoretical yield: 240.5 kg $\text{CH}_4\text{N}_2\text{O}$, percent yield: 70.01%
 61. a. $\text{S}(s) + \text{O}_2(g) \longrightarrow \text{SO}_2(g)$
 b. $2 \text{C}_3\text{H}_6(g) + 9 \text{O}_2(g) \longrightarrow 6 \text{CO}_2(g) + 6 \text{H}_2\text{O}(g)$
 c. $2 \text{Ca}(s) + \text{O}_2(g) \longrightarrow 2 \text{CaO}(g)$
 d. $\text{C}_5\text{H}_{12}\text{S}(l) + 9 \text{O}_2(g) \longrightarrow 5 \text{CO}_2(g) + \text{SO}_2(g) + 6 \text{H}_2\text{O}(g)$
 63. $\text{Sr}(s) + \text{I}_2(g) \longrightarrow \text{SrI}_2(s)$
 65. $2 \text{Li}(s) + 2 \text{H}_2\text{O}(l) \longrightarrow 2 \text{Li}^+(aq) + 2 \text{OH}^-(aq) + \text{H}_2(g)$
 67. $\text{H}_2(g) + \text{Br}_2(g) \longrightarrow 2 \text{HBr}(g)$
 69. 3.1 kg
 71. limiting reactant: $\text{C}_7\text{H}_6\text{O}_3$, theoretical yield: 1.63 g $\text{C}_9\text{H}_8\text{O}_4$, percent yield: 74.8%
 73. b
 75. 0.333 g PH_3
 77. 30.8 kg CO_2
 79. 1.6 g C_2H_2
 81. 2.0 mg
 83. 96.6 g Mn
 85. d
 87. a
 90. a. Experiments 1, 2, and 3
 b. 2 A + 1 B
 c. 2 C

Chapter 8

21. a. 1.17 M LiCl
 b. 0.123 M $\text{C}_6\text{H}_{12}\text{O}_6$
 c. 0.00453 M NaCl
 23. a. 0.150 M NO_3^-
 b. 0.300 M NO_3^-
 c. 0.450 M NO_3^-
 25. a. 1.3 mol
 b. 1.5 mol
 c. 0.211 mol
 27. 37 g
 29. 0.27 M
 31. 6.0 L
 33. 37.1 mL
 35. 2.1 L
 37. barium nitrate, 2.81 g $\text{Ba}(\text{NO}_3)_2$, 87.1%
 39. a. yes b. no c. yes d. no
 41. a. soluble Ag^+ , NO_3^- b. soluble Pb^{2+} , $\text{C}_2\text{H}_3\text{O}_2^-$
 c. soluble K^+ , NO_3^- d. soluble NH_4^+ , S^{2-}
 43. a. NO REACTION b. NO REACTION
 c. $\text{CrBr}_2(aq) + \text{Na}_2\text{CO}_3(aq) \longrightarrow \text{CrCO}_3(s) + 2 \text{NaBr}(aq)$
 d. $3 \text{NaOH}(aq) + \text{FeCl}_3(aq) \longrightarrow \text{Fe}(\text{OH})_3(s) + 3 \text{NaCl}(aq)$
 45. a. $\text{K}_2\text{CO}_3(aq) + \text{Pb}(\text{NO}_3)_2(aq) \longrightarrow \text{PbCO}_3(s) + 2 \text{KNO}_3(aq)$
 b. $\text{Li}_2\text{SO}_4(aq) + \text{Pb}(\text{C}_2\text{H}_3\text{O}_2)_2(aq) \longrightarrow \text{PbSO}_4(s) + 2 \text{LiC}_2\text{H}_3\text{O}_2(aq)$
 c. $\text{Cu}(\text{NO}_3)_2(aq) + \text{MgS}(aq) \longrightarrow \text{CuS}(s) + \text{Mg}(\text{NO}_3)_2(aq)$
 d. NO REACTION
 47. a. Complete:
 $\text{H}^+(aq) + \text{Cl}^-(aq) + \text{Li}^+(aq) + \text{OH}^-(aq) \longrightarrow \text{H}_2\text{O}(l) + \text{Li}^+(aq) + \text{Cl}^-(aq)$
 Net: $\text{H}^+(aq) + \text{OH}^-(aq) \longrightarrow \text{H}_2\text{O}(l)$
 b. Complete:
 $\text{Mg}^{2+}(aq) + \text{S}^{2-}(aq) + \text{Cu}^{2+}(aq) + 2 \text{Cl}^-(aq) \longrightarrow \text{CuS}(s) + \text{Mg}^{2+}(aq) + 2 \text{Cl}^-(aq)$
 Net: $\text{Cu}^{2+}(aq) + \text{S}^{2-}(aq) \longrightarrow \text{CuS}(s)$
 c. Complete:
 $\text{Na}^+(aq) + \text{OH}^-(aq) + \text{H}^+(aq) + \text{NO}_3^-(aq) \longrightarrow \text{H}_2\text{O}(l) + \text{Na}^+(aq) + \text{NO}_3^-(aq)$
 Net: $\text{OH}^-(aq) + \text{H}^+(aq) \longrightarrow \text{H}_2\text{O}(l)$
 d. Complete:
 $6 \text{Na}^+(aq) + 2 \text{PO}_4^{3-}(aq) + 3 \text{Ni}^{2+}(aq) + 6 \text{Cl}^-(aq) \longrightarrow \text{Ni}_3(\text{PO}_4)_2(s) + 6 \text{Na}^+(aq) + 6 \text{Cl}^-(aq)$
 Net: $3 \text{Ni}^{2+}(aq) + 2 \text{PO}_4^{3-}(aq) \longrightarrow \text{Ni}_3(\text{PO}_4)_2(s)$
 49. Complete:
 $\text{Hg}_2^{2+}(aq) + 2 \text{NO}_3^-(aq) + 2 \text{Na}^+(aq) + 2 \text{Cl}^-(aq) \longrightarrow \text{Hg}_2\text{Cl}_2(s) + 2 \text{Na}^+(aq) + 2 \text{NO}_3^-(aq)$
 Net: $\text{Hg}_2^{2+}(aq) + 2 \text{Cl}^-(aq) \longrightarrow \text{Hg}_2\text{Cl}_2(s)$
 51. a. hydroiodic acid b. nitric acid
 c. carbonic acid
 53. a. HF b. HBr c. H_2SO_3
 55. Molecular: $\text{HBr}(aq) + \text{KOH}(aq) \longrightarrow \text{H}_2\text{O}(l) + \text{KBr}(aq)$
 Net ionic: $\text{H}^+(aq) + \text{OH}^-(aq) \longrightarrow \text{H}_2\text{O}(l)$

57. a. $\text{H}_2\text{SO}_4(\text{aq}) + \text{Ca}(\text{OH})_2(\text{aq}) \longrightarrow 2 \text{H}_2\text{O}(\text{l}) + \text{CaSO}_4(\text{s})$
b. $\text{HClO}_4(\text{aq}) + \text{KOH}(\text{aq}) \longrightarrow \text{H}_2\text{O}(\text{l}) + \text{KClO}_4(\text{aq})$
c. $\text{H}_2\text{SO}_4(\text{aq}) + 2 \text{NaOH}(\text{aq}) \longrightarrow 2 \text{H}_2\text{O}(\text{l}) + \text{Na}_2\text{SO}_4(\text{aq})$
59. a. Complete ionic
 $\text{H}^+(\text{aq}) + \text{Br}^-(\text{aq}) + \text{Na}^+(\text{aq}) + \text{OH}^-(\text{aq}) \longrightarrow \text{H}_2\text{O}(\text{l}) + \text{Na}^+(\text{aq}) + \text{Br}^-(\text{aq})$
Net ionic
 $\text{H}^+(\text{aq}) + \text{OH}^-(\text{aq}) \longrightarrow \text{H}_2\text{O}(\text{l})$
b. Complete ionic
 $\text{HF}(\text{aq}) + \text{Na}^+(\text{aq}) + \text{OH}^-(\text{aq}) \longrightarrow \text{H}_2\text{O}(\text{l}) + \text{Na}^+(\text{aq}) + \text{F}^-(\text{aq})$
Net ionic
 $\text{HF}(\text{aq}) + \text{OH}^-(\text{aq}) \longrightarrow \text{H}_2\text{O}(\text{l}) + \text{F}^-(\text{aq})$
c. Complete ionic
 $\text{HC}_2\text{H}_3\text{O}_2(\text{aq}) + \text{Rb}^+(\text{aq}) + \text{OH}^-(\text{aq}) \longrightarrow \text{H}_2\text{O}(\text{l}) + \text{Rb}^+(\text{aq}) + \text{C}_2\text{H}_3\text{O}_2^-(\text{aq})$
Net ionic
 $\text{HC}_2\text{H}_3\text{O}_2(\text{aq}) + \text{OH}^-(\text{aq}) \longrightarrow \text{H}_2\text{O}(\text{l}) + \text{C}_2\text{H}_3\text{O}_2^-(\text{aq})$
61. 0.1810 M HClO_4
63. a. $2 \text{HBr}(\text{aq}) + \text{NiS}(\text{s}) \longrightarrow \text{H}_2\text{S}(\text{g}) + \text{NiBr}_2(\text{aq})$
b. $\text{NH}_4\text{I}(\text{aq}) + \text{NaOH}(\text{aq}) \longrightarrow \text{H}_2\text{O}(\text{l}) + \text{NH}_3(\text{g}) + \text{NaI}(\text{aq})$
c. $2 \text{HBr}(\text{aq}) + \text{Na}_2\text{S}(\text{aq}) \longrightarrow \text{H}_2\text{S}(\text{g}) + 2 \text{NaBr}(\text{aq})$
d. $2 \text{HClO}_4(\text{aq}) + \text{Li}_2\text{CO}_3(\text{aq}) \longrightarrow \text{H}_2\text{O}(\text{l}) + \text{CO}_2(\text{g}) + 2 \text{LiClO}_4(\text{aq})$
65. $2 \text{HClO}_4(\text{aq}) + \text{Li}_2\text{CO}_3(\text{aq}) \longrightarrow \text{H}_2\text{O}(\text{l}) + \text{CO}_2(\text{g}) + 2 \text{LiClO}_4(\text{aq})$
67. a. Ag: 0
b. Ag: +1
c. Ca: +2, F: -1
d. H: +1, S: -2
e. C: +4, O: -2
f. Cr: +6, O: -2
69. a. +2
b. +6
c. +3
71. a. redox reaction, oxidizing agent: O_2 , reducing agent: Li
b. redox reaction, oxidizing agent: Fe^{2+} , reducing agent: Mg
c. not a redox reaction
d. not a redox reaction
73. b and c occur spontaneously in the forward direction
75. Fe, Cr, Zn, Mn, Al, Mg, Na, Ca, K, Li
77. Mg
79. 3.32 M
81. 1.1 g
83. b
85. a. $2 \text{HCl}(\text{aq}) + \text{Hg}_2(\text{NO}_3)_2(\text{aq}) \longrightarrow \text{Hg}_2\text{Cl}_2(\text{s}) + 2 \text{HNO}_3(\text{aq})$
b. $\text{KHSO}_3(\text{aq}) + \text{HNO}_3(\text{aq}) \longrightarrow \text{H}_2\text{O}(\text{l}) + \text{SO}_2(\text{g}) + \text{KNO}_3(\text{aq})$
c. $2 \text{NH}_4\text{Cl}(\text{aq}) + \text{Pb}(\text{NO}_3)_2(\text{aq}) \longrightarrow \text{PbCl}_2(\text{s}) + 2 \text{NH}_4\text{NO}_3(\text{aq})$
d. $2 \text{NH}_4\text{Cl}(\text{aq}) + \text{Ca}(\text{OH})_2(\text{aq}) \longrightarrow 2 \text{NH}_3(\text{g}) + 2 \text{H}_2\text{O}(\text{g}) + \text{CaCl}_2(\text{aq})$
87. 22 g
89. 6.9 g
91. 0.531 L HCl
93. Br is the oxidizing agent, Au is the reducing agent, 38.8 g KAuF_4 .
95. 11.8 g AgI
97. 5.5% by mass

99. Ca^{2+} and Cu^{2+} present in the original solution
Net ionic for first precipitate:
 $\text{Ca}^{2+}(\text{aq}) + \text{SO}_4^{2-}(\text{aq}) \longrightarrow \text{CaSO}_4(\text{s})$
Net ionic for second precipitate:
 $\text{Cu}^{2+}(\text{aq}) + \text{CO}_3^{2-}(\text{aq}) \longrightarrow \text{CuCO}_3(\text{s})$



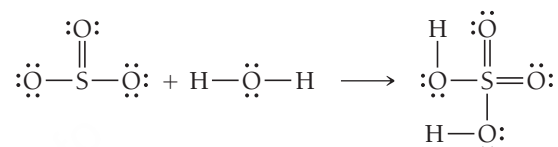
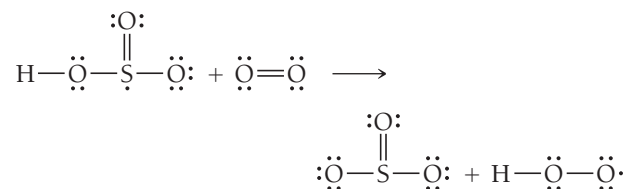
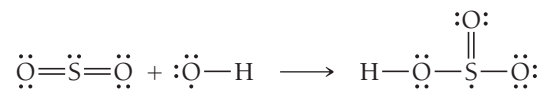
103. The charge of an ion is that actual charge it has due to gaining or losing electrons. The oxidation state of an atom is the charge it would have in a compound if all of the bonding electrons were assigned to the more electronegative atom.
108. a. 10.3 ppb; 3.81 ppb, 1.69 ppb
b. If the water providers used first-draw samples, they would have been required to take action. If they used 2 min flush samples, they would not have been required to take action. Residents probably don't flush their pipes before taking water, so the first-draw technique is probably closer to actual practice.

Chapter 9

31. d
33. a. heat, +
b. work, -
c. heat, +
35. $-7.27 \times 10^2 \text{ kJ}$
37. 311 kJ
39. The drinks that went into cooler B had more thermal energy than the refrigerated drinks that went into cooler A. The temperature difference between the drinks in cooler B and the ice was greater than the difference between the drinks and the ice in cooler A. More thermal energy was exchanged between the drinks and the ice in cooler B, which resulted in more melting.
41. $4.7 \times 10^5 \text{ J}$
43. a. $7.6 \times 10^2^\circ\text{C}$
b. $4.3 \times 10^2^\circ\text{C}$
c. $1.3 \times 10^2^\circ\text{C}$
d. 49°C
45. $-2.8 \times 10^2 \text{ J}$
47. 489 J
49. $\Delta E = -3463 \text{ J}$, $\Delta H = -3452 \text{ kJ}$
51. a. exothermic, -
b. endothermic, +
c. exothermic, -
53. $-4.30 \times 10^3 \text{ kJ}$
55. $6.46 \times 10^4 \text{ kJ}$
57. $9.5 \times 10^2 \text{ g CO}_2$
59. mass of silver 77.1 g
61. Final temperature 28.4°C
63. Specific heat capacity of substance A $1.10 \text{ J/g} \cdot ^\circ\text{C}$

65. Measurement B corresponds to conditions of constant pressure. Measurement A corresponds to conditions of constant volume. When a fuel is burned under constant pressure, some of the energy released does work on the atmosphere by expanding against it. Less energy is manifest as heat due to this work. When a fuel is burned under constant volume, all of the energy released by the combustion reaction is evolved as heat.
67. $-6.3 \times 10^3 \text{ kJ/mol}$
69. $-1.6 \times 10^5 \text{ J}$
71. a. $-\Delta H_1$ b. $2 \Delta H_1$ c. $-\frac{1}{2} \Delta H_1$
73. -23.9 kJ
75. -173.2 kJ
77. -128 kJ
79. -614 kJ
81. a. $\text{N}_2(\text{g}) + 3 \text{H}_2(\text{g}) \longrightarrow 2 \text{NH}_3(\text{g}), \Delta H_f^\circ = -45.9 \text{ kJ/mol}$
 b. $\text{C}(\text{s, graphite}) + \text{O}_2(\text{g}) \longrightarrow \text{CO}_2(\text{g}), \Delta H_f^\circ = -393.5 \text{ kJ/mol}$
 c. $2 \text{Fe}(\text{s}) + 3/2 \text{O}_2(\text{g}) \longrightarrow \text{Fe}_2\text{O}_3(\text{s}), \Delta H_f^\circ = -824.2 \text{ kJ/mol}$
 d. $\text{C}(\text{s, graphite}) + 2 \text{H}_2(\text{g}) \longrightarrow \text{CH}_4(\text{g}), \Delta H_f^\circ = -74.6 \text{ kJ/mol}$
83. -380.2 kJ/mol
85. a. -137.1 kJ b. -41.2 kJ
 c. -137 kJ d. 290.7 kJ
87. $6 \text{CO}_2(\text{g}) + 6 \text{H}_2\text{O}(\text{l}) \longrightarrow \text{C}_6\text{H}_{12}\text{O}_6(\text{s}) + 6 \text{O}_2(\text{g}), \Delta H_{\text{rxn}}^\circ = 2803 \text{ kJ}$
89. -113.0 kJ/mol
91. As the size of the alkaline earth metal ions increases, so does the distance between the metal cations and oxygen anions. Therefore, the magnitude of the lattice energy decreases accordingly because the potential energy decreases as the distance increases.
93. One factor of lattice energy is the product of the charges of the two ions. The product of the ion charges for CsF is -1 , while that for BaO is -4 . Because this product is four times greater, the lattice energy is also four times greater.
95. -708 kJ/mol
97. $\Delta E = -1.7 \text{ J}, q = -0.5 \text{ J}, w = -1.2 \text{ J}$
99. 78 g
101. $\Delta H = 6.0 \text{ kJ/mol}, 1.1 \times 10^2 \text{ g}$
103. 26.1°C
105. palmitic acid: 9.9378 Cal/g , sucrose: 3.938 Cal/g , fat contains more Cal/g than sugar.
107. 5.7 Cal/g
109. $\Delta E = 0, \Delta H = 0, q = -w = 3.0 \times 10^3 \text{ J}$
111. -294 kJ/mol
113. 23.9°C
115. The reaction is exothermic due to the energy released when the Al_2O_3 lattice forms.
117. $\Delta H_{\text{rxn}}(\text{H}_2) = -243 \text{ kJ/mol} = -121 \text{ kJ/g}$
 $\Delta H_{\text{rxn}}(\text{CH}_4) = -802 \text{ kJ/mol} = -50.0 \text{ kJ/g}$
 CH_4 yields more energy per mole, while H_2 yields more energy per gram.

119. 333 kJ/mol
121. $7.3 \times 10^3 \text{ g H}_2\text{SO}_4$
123. $7.2 \times 10^2 \text{ g}$
125. 78.2°C
127. $q = 1030 \text{ kJ}, \Delta H = 1030 \text{ kJ}, \Delta E = 952 \text{ kJ}, w = -78 \text{ kJ}$
- 129.



$$\Delta H_{\text{rxn}} = -172 \text{ kJ}$$

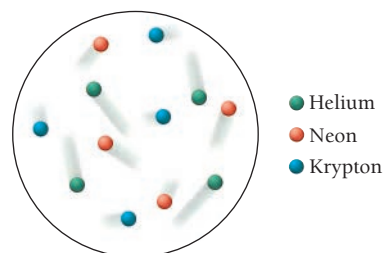
131. -2162 kJ/mol
133. d
135. Refrigerator A contains only air, which will cool quickly but will not stabilize the temperature. Refrigerator B contains containers of water, which require a great deal of energy to cool on day 1 but will remain stable at a cold temperature on day 2.
137. Substance A
139. The internal energy of a chemical system is the sum of its kinetic energy and its potential energy. It is this potential energy that is the energy source in an exothermic chemical reaction. Under normal circumstances, chemical potential energy (or simply chemical energy) arises primarily from the electrostatic forces between the protons and electrons that compose the atoms and molecules within the system. In an exothermic reaction, some bonds break and new ones form, and the protons and electrons go from an arrangement of high potential energy to one of lower potential energy. As they rearrange, their potential energy is converted into kinetic energy. Heat is emitted in the reaction, and so it feels hot to the touch.
141. a
148. a. $\text{C}_3\text{H}_8(\text{g}) + 5 \text{O}_2(\text{g}) \longrightarrow 3 \text{CO}_2(\text{g}) + 4 \text{H}_2\text{O}(\text{l})$
 $\text{C}_3\text{H}_8(\text{g}) + 5 \text{O}_2(\text{g}) \longrightarrow 3 \text{CO}_2(\text{g}) + 4 \text{H}_2\text{O}(\text{g})$
 c. LHV because the water formed is the gaseous state

Chapter 10

25. a. 0.832 atm b. 632 mmHg
 c. 12.2 psi d. $8.43 \times 10^4 \text{ Pa}$
27. a. 809.0 mmHg b. 1.064 atm
 c. 809.0 torr d. 107.9 kPa
29. a. 832 mmHg b. 718 mmHg

31. 4.4×10^2 mmHg
33. 58.9 mL
35. 4.22 L
37. 3.0 L The volume would not be different if the gas was argon.
39. 1.16 atm
41. 2.1 mol
43. Yes, the final gauge pressure is 43.5 psi, which exceeds the maximum rating.
45. 16.2 L
47. 286 atm, 17.5 bottles purged
49. b
51. 4.76 atm
53. 37.3 L
55. 9.43 g/L
57. 44.0 g/mol
59. 4.00 g/mol
61. $P_{\text{tot}} = 434$ torr, $\text{mass}_{\text{N}_2} = 0.437$ g, $\text{mass}_{\text{O}_2} = 0.237$ g, $\text{mass}_{\text{He}} = 0.0340$ g
63. 1.84 atm
65. $\chi_{\text{N}_2} = 0.627$, $\chi_{\text{O}_2} = 0.373$, $P_{\text{N}_2} = 0.687$ atm, $P_{\text{O}_2} = 0.409$ atm
67. $P_{\text{H}_2} = 0.921$ atm, $\text{mass}_{\text{H}_2} = 0.0539$ g
69. 7.47×10^{-2} g
71. a. Yes
b. No
c. No. Even though the argon atoms are more massive than the helium atoms, both have the same kinetic energy at a given temperature. The argon atoms therefore move more slowly, and so exert the same pressure as the helium atoms.
d. He
73. $\text{F}_2 : u_{\text{rms}} = 442$ m/s, $\text{KE}_{\text{avg}} = 3.72 \times 10^3$ J;
 $\text{Cl}_2 : u_{\text{rms}} = 324$ m/s, $\text{KE}_{\text{avg}} = 3.72 \times 10^3$ J;
 $\text{Br}_2 : u_{\text{rms}} = 216$ m/s, $\text{KE}_{\text{avg}} = 3.72 \times 10^3$ J;
rankings : $u_{\text{rms}} : \text{Br}_2 < \text{Cl}_2 < \text{F}_2$, $\text{KE}_{\text{avg}} : \text{Br}_2 = \text{Cl}_2 = \text{F}_2$,
rate of effusion : $\text{Br}_2 < \text{Cl}_2 < \text{F}_2$
75. $\text{rate } ^{238}\text{UF}_6 / \text{rate } ^{235}\text{UF}_6 = 0.99574$
77. krypton
79. A has the higher molar mass, B has the higher rate of effusion.
81. 38 L
83. $V_{\text{H}_2} = 48.2$ L, $V_{\text{CO}} = 24.1$ L
85. 22.8 g NaN_3
87. 60.4%
89. F_2 , 2.84 g ClF_3
91. That the volume of gas particles is small compared to the space between them breaks down under conditions of high pressure. At high pressure, the particles themselves occupy a significant portion of the total gas volume.
93. 0.05826 L (ideal); 0.0708 L (V.D.W.); difference because of high pressure, at which Ne no longer acts ideally
95. 97.8%
97. 27.8 g/mol
99. C_4H_{10}
101. 4.70 L
103. $2 \text{HCl}(aq) + \text{K}_2\text{S}(s) \longrightarrow \text{H}_2\text{S}(g) + 2 \text{KCl}(aq)$, 0.191 g $\text{K}_2\text{S}(s)$

105. 11.7 L
107. $\text{mass}_{\text{air}} = 8.56$ g, $\text{mass}_{\text{He}} = 1.20$ g, mass difference = 7.36 g
109. 4.76 L/s
111. total force = 6.15×10^3 pounds; no, the can cannot withstand this force.
113. 5.8×10^3 balloons
115. 4.0 cm
117. 77.7%
119. 0.32 g
121. 311 K
123. 5.0 g
125. C_3H_8
127. 0.39 g Ar
129. 74.0 mmHg
131. 25% N_2H_4
133. 25%
135. $P_{\text{CH}_4} = 7.30 \times 10^{-2}$ atm, $P_{\text{O}_2} = 4.20 \times 10^{-1}$ atm,
 $P_{\text{NO}} = 2.79 \times 10^{-3}$ atm, $P_{\text{CO}_2} = 5.03 \times 10^{-3}$ atm,
 $P_{\text{H}_2\text{O}} = 5.03 \times 10^{-3}$ atm, $P_{\text{NO}_2} = 2.51 \times 10^{-2}$ atm,
 $P_{\text{OH}} = 1.01 \times 10^{-2}$ atm, $P_{\text{tot}} = 0.542$ atm
137. 0.42 atm
139. Because helium is less dense than air, the balloon moves in a direction opposite the direction in which the air inside the car is moving due to the acceleration and deceleration of the car.
141. -29%
143. a. false b. false c. false d. true
145. Four times the initial pressure
147. Although the velocity "tails" have different lengths, the average length of the tails on the helium atoms is longer than the average length of the tails on the neon atoms, which is in turn longer than the average length of the tails on the krypton atoms. The lighter the atom, the faster they must move on average to have the same kinetic energy.



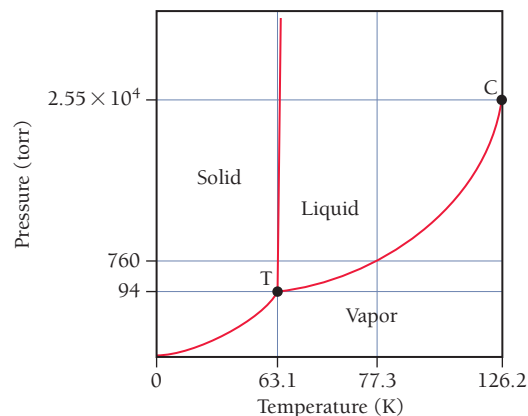
153. a. Inverse
c. 1.3×10^{-6} mol
e. Yes, because in these equations, 1 mole of O_3 reacts to form 1 mole of NO_2 .

Chapter 11

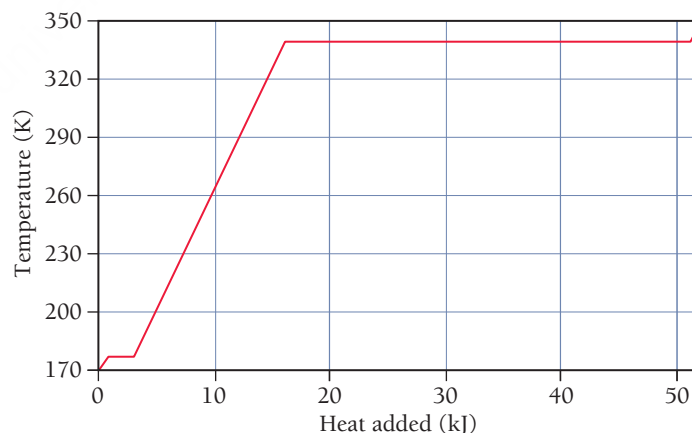
35. a. dispersion
b. dispersion, dipole-dipole, hydrogen bonding
c. dispersion, dipole-dipole
d. dispersion

37. a. dispersion, dipole–dipole
b. dispersion, dipole–dipole, hydrogen bonding
c. dispersion
d. dispersion
39. a, b, c, d, Boiling point increases with increasing intermolecular forces. The molecules increase in their intermolecular forces as follows:
a. dispersion forces;
b. stronger dispersion forces (broader electron cloud);
c. dispersion forces and dipole–dipole interactions;
d. dispersion forces, dipole–dipole interactions, and hydrogen bonding.
41. a. CH_3OH , hydrogen bonding
b. $\text{CH}_3\text{CH}_2\text{OH}$, hydrogen bonding
c. CH_3CH_3 , greater mass, broader electron cloud causes greater dispersion forces
43. a. Br_2 , smaller mass results in weaker dispersion forces
b. H_2S , lacks hydrogen bonding
c. PH_3 , lacks hydrogen bonding
45. a. not homogeneous
b. homogeneous, dispersion, dipole–dipole, hydrogen bonding, ion–dipole
c. homogeneous, dispersion
d. homogeneous, dispersion, dipole–dipole, hydrogen bonding
47. Water. Surface tension increases with increasing intermolecular forces, and water can hydrogen bond while acetone cannot.
49. compound A
51. When the tube is clean, water experiences adhesive forces with glass that are stronger than its cohesive forces, causing it to climb the surface of a glass tube. Water does not experience strong intermolecular forces with oil, so if the tube is coated in oil, the water's cohesive forces will be greater and it will not be attracted to the surface of the tube.
53. The water in the 12-cm dish will evaporate more quickly. The vapor pressure does not change, but the surface area does. The water in the dish evaporates more quickly because the greater surface area allows for more molecules to obtain enough energy at the surface and break free.
55. Water is more volatile than vegetable oil. When the water evaporates, the endothermic process results in cooling.
57. 0.405 L
59. 91°C
61. $\Delta H_{\text{vap}} = 24.7 \text{ kJ/mol}$, bp = 239°C
63. 41 torr
65. 22.0 kJ
67. 2.7°C
69. 30.5 kJ
71. a. solid
b. liquid
c. gas
d. supercritical fluid
e. solid/liquid
f. liquid/gas
g. solid/liquid/gas

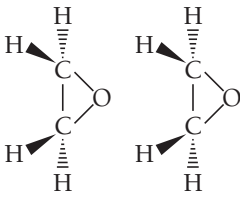
73. N_2 has a stable liquid phase at 1 atm.



75. a. 0.027 mmHg
b. rhombic
77. Water has strong intermolecular forces. It is polar and experiences hydrogen bonding.
79. Water's exceptionally high specific heat capacity has a moderating effect on Earth's climate. Also, its high ΔH_{vap} causes water evaporation and condensation to have a strong effect on temperature.
81. The general trend is that melting point increases with increasing mass. This is because the electrons of the larger molecules are held more loosely and a stronger dipole moment can be induced more easily. HF is the exception to the rule. It has a relatively high melting point due to hydrogen bonding.
83. yes, 1.22 g
85. 26°C
- 87.

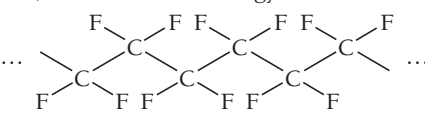
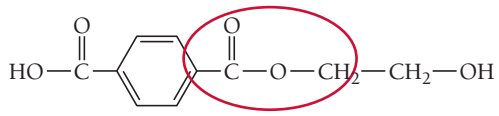
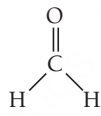
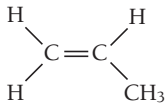
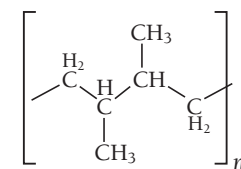


89. $3.4 \times 10^3 \text{ g H}_2\text{O}$
91. 26 mmHg
93. Decreasing the pressure will decrease the temperature of liquid nitrogen. Because the nitrogen is boiling, its temperature must be constant at a given pressure. As the pressure decreases, the boiling point decreases, and therefore so does the temperature. If the pressure drops below the pressure of the triple point, the phase change will shift from vaporization to sublimation and the liquid nitrogen will become solid.
95. 70.7 L

97. The melting of an ice cube in a glass of water will not raise or lower the level of the liquid in the glass as long as the ice is always floating in the liquid. This is because the ice will displace a volume of water based on its mass. By the same logic, melting floating icebergs will not raise ocean levels (assuming that the dissolved solids content, and thus the density, will not change when the icebergs melt). Dissolving ice formations that are supported by land will raise the ocean levels, just as pouring more water into the glass will raise the liquid level in the glass.
99. Substance A
101. The liquid segment will have the least steep slope because it takes the most kJ/mol to raise the temperature of the phase.
103. There are substantial intermolecular attractions in the liquid but virtually none in the gas.
- 105.
- 
111. a. No. Although it does correlate for H_2S , H_2Se , and H_2Te , it does not correlate for H_2O .
c. Water has the highest dipole moment; that together with the small size of the hydrogen atom accounts for the anomalously high boiling point.

Chapter 12

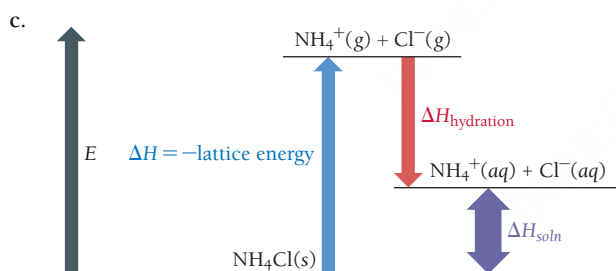
27. 162 pm
29. a. 1 b. 2 c. 4
31. 68%
33. $l = 393 \text{ pm}$, $d = 21.3 \text{ g/cm}^3$
35. 134.5 pm
37. $6.0 \times 10^{23} \text{ atoms/mol}$
39. a. atomic
b. molecular
c. ionic
d. atomic
41. LiCl(s) . The other three solids are held together by intermolecular forces, while LiCl is held together by stronger coulombic interactions between the cations and anions of the crystal lattice.
43. a. $\text{TiO}_2(\text{s})$, ionic solid
b. $\text{SiCl}_4(\text{s})$, larger, stronger dispersion forces
c. Xe(s) , larger, stronger dispersion forces
d. CaO , ions have greater charge and therefore stronger coulombic forces
45. TiO_2
47. Cs : $1(1) = 1$
Cl : $8(1/8) = 1$
1 : 1
CsCl
Ba : $8(1/8) + 6(1/2) = 4$
Cl : $8(1) = 8$
4 : 8 = 1 : 2
 BaCl_2

49. cesium chloride: none of these; barium(II) chloride: fluorite structure
51. face-centered cubic
53. a. nonoxide b. silicate c. nonoxide
55. boron oxide, B_2O_3
57. Ca : +2; Si : +2; O : -2
59. a. Zn(s)
61. 0.807 mol orbitals
63. insulator
65. a. p-type
b. n-type
67. Yes, it has sufficient energy.
- 69.
- 
- 71.
- 
73. $\text{H}-\text{C}\equiv\text{C}-\text{H}$
- 75.
- 
77. CsCl has a higher melting point than AgI because of its higher coordination number. In CsCl, one anion bonds to eight cations (and vice versa), while in AgI, one anion bonds to only four cations.
79. a. $4r$
b. $c^2 = a^2 + b^2$ $c = 4r$, $a = l$, $b = l$
 $(4r)^2 = l^2 + l^2$
 $16r^2 = 2l^2$
 $8r^2 = l^2$
 $l = \sqrt{8r^2}$
 $l = 2\sqrt{2}r$
81. 8 atoms/unit
83. 55.843 g/mol
85. 2.00 g/cm^3
87. body diagonal = $\sqrt{6}r$, radius = $(\sqrt{3} - \sqrt{2})r/\sqrt{2} = 0.2247r$
89. The higher-level electron transitions with their smaller energy gaps would not give off enough energy to create X-rays.
91. a.
- 
- b.
- 
- To obtain this structure, the monomer from part a would react in a head-to-head (or tail-to-tail) addition as opposed to the head-to-tail addition that leads to the structure shown in Table 12.2.

93. Because the structure is face-centered cubic, there are four C_{60} molecules per unit cell. Thus, there must be $3 \times 4 = 12$ Rb atoms per unit cell, and all sites (tetrahedral and octahedral) are occupied.
95. The liquid must be cooled quickly in order to prevent the formation of an organized crystal structure, and instead achieve an amorphous product.
97. Both structures may be viewed as having essentially a face-centered cubic unit cell, with half of the tetrahedral holes filled. Diamond, however, consists of only one type of atom (C) and is covalently bound, whereas zinc blende has S^{2-} ions at the face-centered cubic sites and Zn^{2+} ions in the tetrahedral holes, and is held together by ionic forces.
99. d. All of the above would likely lead to an increase in electrical conductivity.
105. a. 20% Cr and 80% Ni; 1405°
c. 97% Cr and 3% Ni; body-centered cubic

Chapter 13

25. a. hexane, toluene, or CCl_4 ; dispersion forces
b. water, methanol; dispersion, dipole–dipole, hydrogen bonding
c. hexane, toluene, or CCl_4 ; dispersion forces
d. water, acetone, methanol, ethanol; dispersion, ion–dipole
27. $HOCH_2CH_2CH_2OH$
29. a. water; dispersion, dipole–dipole, hydrogen bonding
b. hexane; dispersion
c. water; dispersion, dipole–dipole
d. water; dispersion, dipole–dipole, hydrogen bonding
31. a. endothermic
b. The lattice energy is greater in magnitude than the heat of hydration.



- d. The solution forms because chemical systems tend toward greater entropy.
33. -797 kJ/mol
35. $\Delta H_{\text{soln}} = -6 \times 10^1 \text{ kJ/mol}$, -7 kJ of energy evolved
37. unsaturated
39. About 31 g will precipitate.
41. Boiling water releases any O_2 dissolved in it. The solubility of gases decreases with increasing temperature.
43. As pressure increases, nitrogen will more easily dissolve in blood. To reverse this process, divers should ascend to lower pressures.
45. 1.1 g
47. 1.92 M, 2.0 m, 10.4%
49. 0.340 L

51. $1.6 \times 10^2 \text{ g Ag}$
53. $1.4 \times 10^4 \text{ g}$
55. Add water to 7.31 mL of concentrated solution until a total volume of 1.15 L is acquired.
57. a. Add water to 3.73 g KCl to a volume of 100 mL.
b. Add 3.59 g KCl to 96.41 g H_2O .
c. Add 5.0 g KCl to 95 g H_2O .
59. a. 0.417 M
b. 0.444 m
c. 7.41% by mass
d. 0.00794
e. 0.794% by mole
61. 0.89 M
63. 15 m, 0.22
65. The level has decreased more in the beaker filled with pure water. The dissolved salt in the seawater decreases the vapor pressure and subsequently lowers the rate of vaporization.
67. 30.7 torr
69. a. $P_{\text{hep}} = 24.4 \text{ torr}$, $P_{\text{oct}} = 5.09 \text{ torr}$
b. 29.5 torr
c. 80.8% heptane by mass, 19.2% octane by mass
d. The vapor is richer in the more volatile component.
71. $P_{\text{chl}} = 51.9 \text{ torr}$, $P_{\text{ace}} = 274 \text{ torr}$, $P_{\text{tot}} = 326 \text{ torr}$. The solution is not ideal. The chloroform–acetone interactions are stronger than the chloroform–chloroform and acetone–acetone interactions.
73. freezing point (fp) = -1.27°C , bp = 100.349°C
75. freezing point (fp) = 1.0°C , boiling point (bp) = 82.4°C
77. $1.8 \times 10^2 \text{ g/mol}$
79. 26.1 atm
81. $6.36 \times 10^3 \text{ g/mol}$
83. a. fp = -0.558°C , bp = 100.154°C
b. fp = -1.98°C , bp = 100.546°C
c. fp = -2.5°C , bp = 100.70°C
85. 160 g
87. a. -0.632°C
b. 5.4 atm
c. 100.18°C
89. 2.3
91. 3.4
93. 23.0 torr
95. Chloroform is polar and has stronger solute–solvent interactions than nonpolar carbon tetrachloride.
97. $\Delta H_{\text{soln}} = 51 \text{ kJ/mol}$, -8.7°C
99. $2.2 \times 10^{-3} \text{ M/atm}$
101. $1.3 \times 10^4 \text{ L}$
103. 0.24 g
105. -24°C
107. a. 1.1% by mass/V
b. 1.6% by mass/V
c. 5.3% by mass/V
109. 2.484
111. 0.229 atm
113. $\chi_{\text{CHCl}_3}(\text{original}) = 0.657$, $P_{\text{CHCl}_3}(\text{condensed}) = 0.346 \text{ atm}$
115. 1.74 M

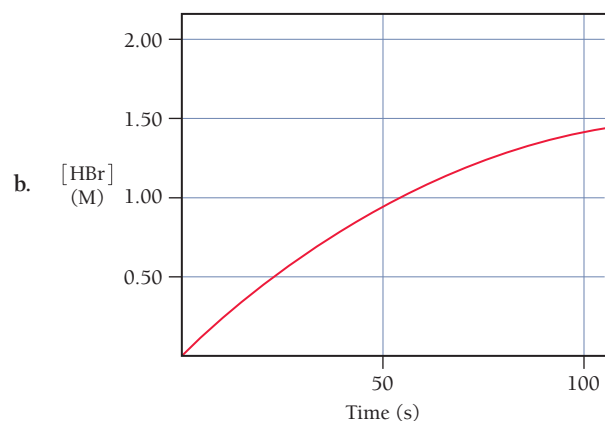
117. $\text{C}_6\text{H}_{14}\text{O}_2$
 119. 12 g
 121. $6.4 \times 10^{-3} \text{ L}$
 123. 22.4% glucose by mass, 77.6% sucrose by mass
 125. $P_{\text{iso}} = 0.131 \text{ atm}$, $P_{\text{pro}} = 0.068 \text{ atm}$. The major intermolecular attractions are between the OH groups. The OH group at the end of the chain in propyl alcohol is more accessible than the one in the middle of the chain in isopropyl alcohol. In addition, the molecular shape of propyl alcohol is a straight chain of carbon atoms, while that of isopropyl alcohol is a branched chain and is more like a ball. The contact area between two ball-like objects is smaller than that of two chain-like objects. The smaller contact area in isopropyl alcohol means the molecules don't attract each other as strongly as do those of propyl alcohol. As a result of both of these factors, the vapor pressure of isopropyl alcohol is higher.
 127. 0.0097 m
 129. Na_2CO_3 0.050 M, NaHCO_3 0.075 M
 131. The water should not be immediately cycled back into the river. As the water was warmed, dissolved oxygen would have been released, since the amount of a gas able to be dissolved into a liquid decreases as the temperature of the liquid increases. As such, the water returned to the river would lack dissolved oxygen if it was still hot. To preserve the dissolved oxygen necessary for the survival of fish and other aquatic life, the water must first be cooled.
 133. b. NaCl
 140. a. The salinity of seawater is generally higher near the equator and lower near the poles.
 c. -2.3°C

Chapter 14

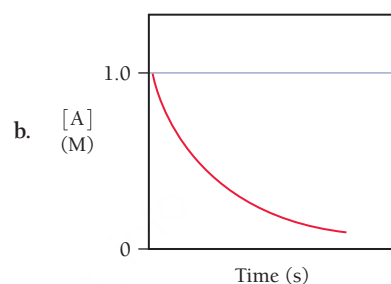
27. a. $\text{rate} = -\frac{1}{2} \frac{\Delta[\text{HBr}]}{\Delta t} = \frac{\Delta[\text{H}_2]}{\Delta t} = \frac{\Delta[\text{Br}_2]}{\Delta t}$
 b. $1.8 \times 10^{-3} \text{ M/s}$
 c. 0.040 mol Br_2
 29. a. $\text{rate} = -\frac{1}{2} \frac{\Delta[\text{A}]}{\Delta t} = -\frac{\Delta[\text{B}]}{\Delta t} = \frac{1}{3} \frac{\Delta[\text{C}]}{\Delta t}$
 b. $\frac{\Delta[\text{B}]}{\Delta t} = -0.0500 \text{ M/s}$, $\frac{\Delta[\text{C}]}{\Delta t} = 0.150 \text{ M/s}$

$\Delta[\text{Cl}_2]/\Delta t$	$\Delta[\text{F}_2]/\Delta t$	$\Delta[\text{ClF}_3]/\Delta t$	Rate
-0.012 M/s	-0.036 M/s	0.024 M/s	0.012 M/s

33. a. $0 \rightarrow 10 \text{ s}$: $\text{rate} = 8.7 \times 10^{-3} \text{ M/s}$
 $40 \rightarrow 50 \text{ s}$: $\text{rate} = 6.0 \times 10^{-3} \text{ M/s}$
 b. $1.4 \times 10^{-2} \text{ M/s}$
 35. a. (i) $1.0 \times 10^{-2} \text{ M/s}$
 (ii) $8.5 \times 10^{-3} \text{ M/s}$
 (iii) 0.013 M/s



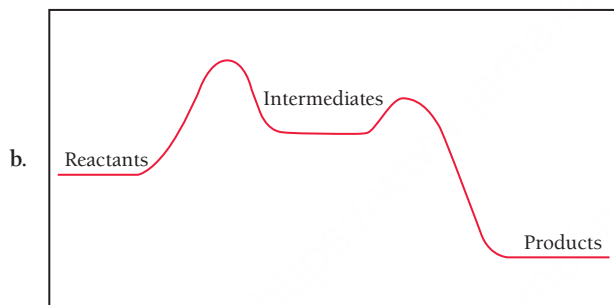
37. a. first order



- c. $\text{rate} = k[\text{A}]^1$, $k = 0.010 \text{ s}^{-1}$
 39. a. s^{-1} b. $\text{M}^{-1} \text{ s}^{-1}$ c. $\text{M} \cdot \text{s}^{-1}$
 41. a. $\text{rate} = k[\text{A}][\text{B}]^2$ b. third order c. 2
 d. 4 e. 1 f. 8
 43. second order, $\text{rate} = 5.25 \text{ M}^{-1} \text{ s}^{-1} [\text{A}]^2$
 45. $\text{rate} = k[\text{NO}_2][\text{F}_2]$, $k = 2.57 \text{ M}^{-1} \text{ s}^{-1}$, second order
 47. a. zero order b. first order c. second order
 49. second order, $k = 2.25 \times 10^{-2} \text{ M}^{-1} \text{ s}^{-1}$, $[\text{AB}]$ at 25 s = 0.619 M
 51. first order, $k = 1.12 \times 10^{-2} \text{ s}^{-1}$, $\text{rate} = 2.8 \times 10^{-3} \text{ M/s}$
 53. a. $4.5 \times 10^{-3} \text{ s}^{-1}$ b. $\text{rate} = 4.5 \times 10^{-3} \text{ s}^{-1} [\text{A}]$
 c. $1.5 \times 10^2 \text{ s}$ d. $[\text{A}] = 0.0908 \text{ M}$
 55. a. $4.88 \times 10^3 \text{ s}$ b. $9.8 \times 10^3 \text{ s}$
 c. $1.7 \times 10^3 \text{ s}$ d. 0.146 M at 200 s, 0.140 M at 500 s
 57. $6.8 \times 10^8 \text{ yr}$; $1.8 \times 10^{17} \text{ atoms}$
 59.

61. 17 s^{-1}
 63. 61.90 kJ/mol
 65. $E_a = 251 \text{ kJ/mol}$, $A = 7.93 \times 10^{11} \text{ s}^{-1}$
 67. $E_a = 23.0 \text{ kJ/mol}$, $A = 8.05 \times 10^{10} \text{ M}^{-1} \text{ s}^{-1}$
 69. a. 122 kJ/mol
 b. 0.101 s^{-1}

71. 47.85 kJ/mol
 73. a
 75. The mechanism is valid.
 77. a. $\text{Cl}_2(\text{g}) + \text{CHCl}_3(\text{g}) \longrightarrow \text{HCl}(\text{g}) + \text{CCl}_4(\text{g})$
 b. $\text{Cl}(\text{g}), \text{CCl}_3(\text{g})$
 c. $\text{rate} = k[\text{Cl}_2]^{1/2}[\text{CHCl}_3]$
 79. Heterogeneous catalysts require a large surface area because catalysis can only happen at the surface. A greater surface area means greater opportunity for the substrate to react, which results in a faster reaction.
 81. 10^{12}
 83. a. first order, $k = 0.0462 \text{ hr}^{-1}$
 b. 15 hr
 c. $5.0 \times 10^1 \text{ hr}$
 85. 0.0531 M/s
 87. $\text{rate} = 4.5 \times 10^{-4} [\text{CH}_3\text{CHO}]^2$, $k = 4.5 \times 10^{-4}$, 0.37 atm
 89. 219 torr
 91. $1 \times 10^{-7} \text{ s}$
 93. $1.6 \times 10^2 \text{ seconds}$
 95. a. 2



- b. c. first step
 d. exothermic
 97. a. 5.41 s
 b. 2.2 s for 25% 5.4 s for 50%
 c. 0.28 at 10 s, 0.077 at 20 s
 99. a. $E_a = 89.5 \text{ kJ/mol}$, $A = 4.22 \times 10^{11} \text{ s}^{-1}$
 b. $2.5 \times 10^{-5} \text{ M}^{-1} \text{ s}^{-1}$
 c. $6.0 \times 10^{-4} \text{ M/s}$
 101. a. No
 b. No bond is broken, and the two radicals attract each other.
 c. Formation of diatomic gases from atomic gases
 103. $1.35 \times 10^4 \text{ yr}$
 105. a. Both are valid. For both, all steps sum to overall reaction, and the predicted rate law is consistent with experimental data.
 b. buildup of $\text{I}(\text{g})$
 107. $\text{rate} = k_2[(k_1/k_{-1})[\text{Br}_2]]^{1/2}[\text{H}_2]$
 The rate law is 3/2 order overall.
 109. a. 0%
 b. 25%
 c. 33%

111. 174 kJ
 113. a. second order
 b. $\text{CH}_3\text{NC} + \text{CH}_3\text{NC} \xrightleftharpoons[k_{-1}]{k_1} \text{CH}_3\text{NC}^* + \text{CH}_3\text{NC} \quad (\text{fast})$
 $\text{CH}_3\text{NC}^* \xrightarrow{k_2} \text{CH}_3\text{CN} \quad (\text{slow})$
 $\text{rate} = k_3[\text{CH}_3\text{NC}^*]$
 $k_1[\text{CH}_3\text{NC}]^2 = k_2[\text{CH}_3\text{NC}^*][\text{CH}_3\text{NC}]$
 $[\text{CH}_3\text{NC}^*] = \frac{k_1}{k_2}[\text{CH}_3\text{NC}]$
 $\text{rate} = k_3 \times \frac{k_1}{k_2}[\text{CH}_3\text{NC}]$
 $\text{rate} = k[\text{CH}_3\text{NC}]$
 115. $\text{rate} = k[\text{A}]^2$
 $\text{rate} = -\frac{d[\text{A}]}{dt}$
 $\frac{d[\text{A}]}{dt} = -k[\text{A}]^2$
 $-\frac{d[\text{A}]}{[\text{A}]^2} = k dt$
 $\int_{[\text{A}]_0}^{[\text{A}]} -\frac{1}{[\text{A}]^2} d[\text{A}] = \int_0^t k dt$
 $\left[\frac{1}{[\text{A}]} \right]_{[\text{A}]_0}^{[\text{A}]} = k [t]_0^t$
 $\frac{1}{[\text{A}]} - \frac{1}{[\text{A}]_0} = kt$
 $\frac{1}{[\text{A}]} = kt + \frac{1}{[\text{A}]_0}$
 117. $\text{rate} = k[\text{CO}][\text{Cl}_2]^{\frac{3}{2}}$
 119. $[\text{Cl}_2] = 0.0084 \text{ mol/L}$, $[\text{NO}] = 0.017 \text{ mol/L}$
 121. B is first order and A is second order. B will be linear if you plot $\ln[\text{B}]$ versus time; A will be linear if you plot $1/[\text{A}]$ versus time.
 125. a. The reaction is first order in CH_4 and first order in O_3 .
 b. $1.7 \times 10^{-18} \text{ M/s}$

Chapter 15

21. a. $K = \frac{[\text{SbCl}_3][\text{Cl}_2]}{[\text{SbCl}_5]}$ b. $K = \frac{[\text{NO}]^2[\text{Br}_2]}{[\text{BrNO}]^2}$
 c. $K = \frac{[\text{CS}_2][\text{H}_2]^4}{[\text{CH}_4][\text{H}_2\text{S}]^2}$ d. $K = \frac{[\text{CO}_2]^2}{[\text{CO}]^2[\text{O}_2]}$
 23. The concentration of the reactants will be greater. No, this is not dependent on initial concentrations; it is dependent on the value of K_c .
 25. a. figure v
 b. The change in the decrease of reactants and increase of products would be faster.
 c. No, catalysts affect kinetics, not equilibrium.
 27. a. 4.42×10^{-5} , reactants favored
 b. 1.50×10^2 , products favored
 c. 1.96×10^{-9} , reactants favored
 29. 1.3×10^{-29}

55. $[\text{H}_3\text{O}^+] = 1.5 \times 10^{-7} \text{ M}$, pH = 6.81
57. pH = 1.36, 1.35, 1.34 A difference of 1 in the second significant digit in a concentration value produces a difference of 0.01 in pH. Therefore, the second significant digit in value of the concentration corresponds to the hundredths place in a pH value.
59. a. $[\text{H}_3\text{O}^+] = 0.25 \text{ M}$, $[\text{OH}^-] = 4.0 \times 10^{-14} \text{ M}$, pH = 0.60
 b. $[\text{H}_3\text{O}^+] = 0.015 \text{ M}$, $[\text{OH}^-] = 6.7 \times 10^{-13} \text{ M}$, pH = 1.82
 c. $[\text{H}_3\text{O}^+] = 0.072 \text{ M}$, $[\text{OH}^-] = 1.4 \times 10^{-13} \text{ M}$, pH = 1.14
 d. $[\text{H}_3\text{O}^+] = 0.105 \text{ M}$, $[\text{OH}^-] = 9.5 \times 10^{-14} \text{ M}$, pH = 0.979
61. a. 1.8 g b. 0.57 g c. 0.045 g
63. 2.21
65. $[\text{H}_3\text{O}^+] = 2.5 \times 10^{-3} \text{ M}$, pH = 2.59
67. a. 1.82 (approximation valid)
 b. 2.18 (approximation breaks down)
 c. 2.72 (approximation breaks down)
69. 2.75
71. 6.8×10^{-6}
73. 0.0063%
75. a. 0.42% b. 0.60% c. 1.3% d. 1.9%
77. 3.61×10^{-5}
79. a. pH = 1.89; percent ionization = 5.1%
 b. pH = 2.10; percent ionization = 7.9%
 c. pH = 2.26; percent ionization = 11%
81. a. 0.939 b. 1.07 c. 2.19 d. 3.02
83. a. $[\text{OH}^-] = 0.15 \text{ M}$, $[\text{H}_3\text{O}^+] = 6.7 \times 10^{-14} \text{ M}$,
 pH = 13.17, pOH = 0.83
 b. $[\text{OH}^-] = 0.003 \text{ M}$, $[\text{H}_3\text{O}^+] = 3.3 \times 10^{-12} \text{ M}$,
 pH = 11.48, pOH = 2.52
 c. $[\text{OH}^-] = 9.6 \times 10^{-4} \text{ M}$, $[\text{H}_3\text{O}^+] = 1.0 \times 10^{-11} \text{ M}$,
 pH = 10.98, pOH = 3.02
 d. $[\text{OH}^-] = 8.7 \times 10^{-5} \text{ M}$, $[\text{H}_3\text{O}^+] = 1.1 \times 10^{-10} \text{ M}$,
 pH = 9.93, pOH = 4.07
85. 13.842
87. 0.104 L
89. a. $\text{NH}_3(\text{aq}) + \text{H}_2\text{O}(\text{l}) \rightleftharpoons \text{NH}_4^+(\text{aq}) + \text{OH}^-(\text{aq})$,

$$K_b = \frac{[\text{NH}_4^+][\text{OH}^-]}{[\text{NH}_3]}$$

 b. $\text{HCO}_3^-(\text{aq}) + \text{H}_2\text{O}(\text{l}) \rightleftharpoons \text{H}_2\text{CO}_3(\text{aq}) + \text{OH}^-(\text{aq})$, $K_b = \frac{[\text{H}_2\text{CO}_3][\text{OH}^-]}{[\text{HCO}_3^-]}$
 c. $\text{CH}_3\text{NH}_2(\text{aq}) + \text{H}_2\text{O}(\text{l}) \rightleftharpoons \text{CH}_3\text{NH}_3^+(\text{aq}) + \text{OH}^-(\text{aq})$, $K_b = \frac{[\text{CH}_3\text{NH}_3^+][\text{OH}^-]}{[\text{CH}_3\text{NH}_2]}$
91. $[\text{OH}^-] = 1.6 \times 10^{-3} \text{ M}$, pOH = 2.79, pH = 11.21
93. 7.48
95. 6.7×10^{-7}
97. a. neutral
 b. basic, $\text{ClO}^-(\text{aq}) + \text{H}_2\text{O}(\text{l}) \rightleftharpoons \text{HClO}(\text{aq}) + \text{OH}^-(\text{aq})$
 c. basic, $\text{CN}^-(\text{aq}) + \text{H}_2\text{O}(\text{l}) \rightleftharpoons \text{HCN}(\text{aq}) + \text{OH}^-(\text{aq})$
 d. neutral
99. $[\text{OH}^-] = 2.0 \times 10^{-6} \text{ M}$, pH = 8.30
101. a. acidic, $\text{NH}_4^+(\text{aq}) + \text{H}_2\text{O}(\text{l}) \rightleftharpoons \text{NH}_3(\text{aq}) + \text{H}_3\text{O}^+(\text{aq})$
 b. neutral
 c. acidic, $\text{Co}(\text{H}_2\text{O})_6^{3+}(\text{aq}) + \text{H}_2\text{O}(\text{l}) \rightleftharpoons \text{Co}(\text{H}_2\text{O})_5(\text{OH})^{2+}(\text{aq}) + \text{H}_3\text{O}^+(\text{aq})$
 d. acidic, $\text{CH}_2\text{NH}_3^+(\text{aq}) + \text{H}_2\text{O}(\text{l}) \rightleftharpoons \text{CH}_2\text{NH}_2(\text{aq}) + \text{H}_3\text{O}^+(\text{aq})$
103. a. acidic b. basic c. neutral
 d. acidic e. acidic
105. NaOH, NaHCO₃, NaCl, NH₄ClO₂, NH₄Cl
107. a. 5.13 b. 8.87 c. 7.0
109. $[\text{K}^+] = 0.15 \text{ M}$, $[\text{F}^-] = 0.15 \text{ M}$, $[\text{HF}] = 2.1 \times 10^{-6} \text{ M}$,
 $[\text{H}_3\text{O}^+] = 4.8 \times 10^{-9} \text{ M}$
111. a. F⁻ b. NO₂⁻ c. ClO⁻
113. $\text{H}_3\text{PO}_4(\text{aq}) + \text{H}_2\text{O}(\text{l}) \rightleftharpoons \text{H}_2\text{PO}_4^-(\text{aq}) + \text{H}_3\text{O}^+(\text{aq})$,

$$K_{a1} = \frac{[\text{H}_3\text{O}^+][\text{H}_2\text{PO}_4^-]}{[\text{H}_3\text{PO}_4]}$$

 $\text{H}_2\text{PO}_4^-(\text{aq}) + \text{H}_2\text{O}(\text{l}) \rightleftharpoons \text{HPO}_4^{2-}(\text{aq}) + \text{H}_3\text{O}^+(\text{aq})$,

$$K_{a2} = \frac{[\text{H}_3\text{O}^+][\text{HPO}_4^{2-}]}{[\text{H}_2\text{PO}_4^-]}$$

 $\text{HPO}_4^{2-}(\text{aq}) + \text{H}_2\text{O}(\text{l}) \rightleftharpoons \text{PO}_4^{3-}(\text{aq}) + \text{H}_3\text{O}^+(\text{aq})$,

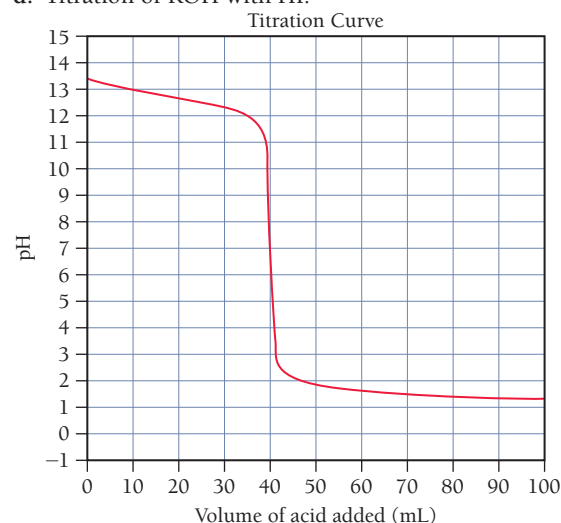
$$K_{a3} = \frac{[\text{H}_3\text{O}^+][\text{PO}_4^{3-}]}{[\text{HPO}_4^{2-}]}$$
115. a. $[\text{H}_3\text{O}^+] = 0.048 \text{ M}$, pH = 1.32
 b. $[\text{H}_3\text{O}^+] = 0.12 \text{ M}$, pH = 0.92
117. $[\text{H}_2\text{SO}_3] = 0.418 \text{ M}$
 $[\text{HSO}_3^-] = 0.082 \text{ M}$
 $[\text{SO}_3^{2-}] = 6.4 \times 10^{-8} \text{ M}$
 $[\text{H}_3\text{O}^+] = 0.082 \text{ M}$
119. a. $[\text{H}_3\text{O}^+] = 0.50 \text{ M}$, pH = 0.30
 b. $[\text{H}_3\text{O}^+] = 0.11 \text{ M}$, pH = 0.96 (*x* is small approximation breaks down)
 c. $[\text{H}_3\text{O}^+] = 0.059 \text{ M}$, pH = 1.23
121. a. Lewis acid b. Lewis acid
 c. Lewis base d. Lewis base
123. a. acid: Fe³⁺, base: H₂O b. acid: Zn²⁺, base: NH₃
 c. acid: BF₃, base: (CH₃)₃N
125. a. weak b. strong c. weak d. strong
127. If blood became acidic, the H⁺ concentration would increase. According to Le Châtelier's principle, equilibrium would be shifted to the left and the concentration of oxygenated Hb would decrease.
129. All acid will be neutralized.
131. $[\text{H}_3\text{O}^+](\text{Great Lakes}) = 3 \times 10^{-5} \text{ M}$,
 $[\text{H}_3\text{O}^+](\text{West Coast}) = 4 \times 10^{-6} \text{ M}$. The rain over the Great Lakes is about 8 times more concentrated.
133. 2.7
135. a. 2.000 b. 1.52 c. 12.95 d. 11.12 e. 5.03
137. a. 1.260 b. 8.22 c. 0.824 d. 8.57 e. 1.171
139. a. $\text{CN}^-(\text{aq}) + \text{H}^+(\text{aq}) \rightleftharpoons \text{HCN}(\text{aq})$
 b. $\text{NH}_4^+(\text{aq}) + \text{OH}^-(\text{aq}) \rightleftharpoons \text{NH}_3(\text{aq}) + \text{H}_2\text{O}(\text{l})$
 c. $\text{CN}^-(\text{aq}) + \text{NH}_4^+(\text{aq}) \rightleftharpoons \text{HCN}(\text{aq}) + \text{NH}_3(\text{aq})$
 d. $\text{HSO}_4^-(\text{aq}) + \text{C}_2\text{H}_3\text{O}_2^-(\text{aq}) \rightleftharpoons \text{SO}_4^{2-}(\text{aq}) + \text{HC}_2\text{H}_3\text{O}_2(\text{aq})$
 e. no reaction between the major species

141. 0.794
143. $K_a = 8.3 \times 10^{-4}$
145. The student forgot to account for the dissociation of water.
Correct pH is 6.79.
147. 2.14
149. $[A^-] = 4.5 \times 10^{-5} \text{ M}$
 $[H^+] = 2.2 \times 10^{-4} \text{ M}$
 $[HA_2^-] = 1.8 \times 10^{-4} \text{ M}$
151. 9.28
153. 50.1 g NaHCO_3
155. b
157. $\text{CH}_3\text{COOH} < \text{CH}_2\text{ClCOOH} < \text{CHCl}_2\text{COOH}$
 $< \text{CCl}_3\text{COOH}$
164. a. 9.2 g SO_2
c. $\text{S}_2\text{O}_5^{2-}(\text{aq}) + \text{H}_2\text{O}(\text{l}) \longrightarrow 2 \text{HSO}_3^-(\text{aq})$
e. 16 g for (a) and 15 g for (b)

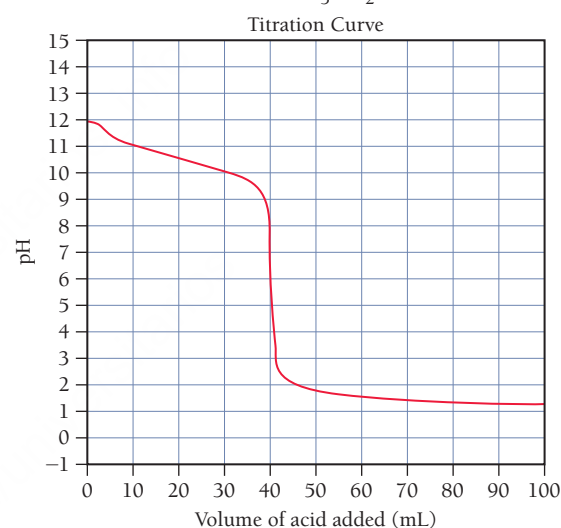
Chapter 17

25. d
27. a. 3.62
b. 9.11
29. pure water: 2.1%, in $\text{NaC}_7\text{H}_5\text{O}_2$: 0.065%. The percent ionization in the sodium benzoate solution is much smaller because the presence of the benzoate ion shifts the equilibrium to the left.
31. a. 2.14 b. 8.32 c. 3.46
33. $\text{HCl} + \text{NaC}_2\text{H}_3\text{O}_2 \longrightarrow \text{HC}_2\text{H}_3\text{O}_2 + \text{NaCl}$
 $\text{NaOH} + \text{HC}_2\text{H}_3\text{O}_2 \longrightarrow \text{NaC}_2\text{H}_3\text{O}_2 + \text{H}_2\text{O}$
35. a. 3.62 b. 9.11
37. a. 7.60 b. 11.18 c. 4.61
39. a. 3.86 b. 8.95
41. 3.5
43. 3.7 g
45. a. 4.74 b. 4.68 c. 4.81
47. a. initial 7.00
after 1.70
b. initial 4.71
after 4.56
c. initial 10.78
after 10.66
49. 1.2 g; 2.7 g
51. a. yes b. no c. yes
d. no e. no
53. a. 7.4 b. 0.3 g c. 0.14 g
55. $\text{KClO}/\text{HClO} = 0.79$
57. a. does not exceed capacity b. does not exceed capacity
c. does not exceed capacity d. does not exceed capacity
59. (i) a. pH = 8, b. pH = 7
(ii) a. weak acid, b. strong acid
61. a. 40.0 mL HI for both
b. KOH: neutral, CH_3NH_2 : acidic
c. CH_3NH_2

d. Titration of KOH with HI:



Titration of CH_3NH_2 with HI:



63. a. pH = 9, added base = 30 mL
b. 0 mL c. 15 mL
d. 30 mL e. 30 mL
65. a. 0.757 b. 30.6 mL c. 1.038
d. 7 e. 12.15
67. a. 13.06 b. 28.8 mL c. 12.90
d. 7 e. 2.07
69. a. 2.86 b. 16.8 mL c. 4.37
d. 4.74 e. 8.75 f. 12.17
71. a. 11.94 b. 29.2 mL c. 11.33
d. 10.64 e. 5.87 f. 1.90
73. (i) (a) (ii) (b)
75. $\text{p}K_a = 3, 82 \text{ g/mol}$
77. first equivalence: 22.7 mL
second equivalence: 45.4 mL
79. The indicator will appear red. The pH range is 4 to 6.
81. a. phenol red, *m*-nitrophenol
b. alizarin, bromothymol blue, phenol red
c. alizarin yellow R

83. a. $\text{BaSO}_4(s) \rightleftharpoons \text{Ba}^{2+}(aq) + \text{SO}_4^{2-}(aq)$, $K_{\text{sp}} = [\text{Ba}^{2+}][\text{SO}_4^{2-}]$
 b. $\text{PbBr}_2(s) \rightleftharpoons \text{Pb}^{2+}(aq) + 2 \text{Br}^-(aq)$, $K_{\text{sp}} = [\text{Pb}^{2+}][\text{Br}^-]^2$
 c. $\text{Ag}_2\text{CrO}_4(s) \rightleftharpoons 2 \text{Ag}^+(aq) + \text{CrO}_4^{2-}(aq)$, $K_{\text{sp}} = [\text{Ag}^+]^2[\text{CrO}_4^{2-}]$
85. a. $7.31 \times 10^{-7} \text{ M}$ b. $3.72 \times 10^{-5} \text{ M}$ c. $3.32 \times 10^{-4} \text{ M}$
87. a. 1.07×10^{-21} b. 7.14×10^{-7} c. 7.44×10^{-11}
89. AX_2
91. $2.07 \times 10^{-5} \text{ g/100 mL}$
93. a. 0.0183 M b. 0.00783 M c. 0.00109 M
95. a. $5 \times 10^{14} \text{ M}$ b. $5 \times 10^8 \text{ M}$ c. $5 \times 10^4 \text{ M}$
97. a. more soluble, CO_3^{2-} is basic
 b. more soluble, S^{2-} is basic
 c. not, neutral
 d. not, neutral
99. Precipitate will form, CaF_2 .
101. Precipitate will form, $\text{Mg}(\text{OH})_2$.
103. a. 0.018 M b. $1.4 \times 10^{-7} \text{ M}$ c. $1.1 \times 10^{-5} \text{ M}$
105. a. BaSO_4 , $1.1 \times 10^{-8} \text{ M}$
 b. $3.0 \times 10^{-8} \text{ M}$
107. $8.7 \times 10^{-10} \text{ M}$
109. 5.6×10^{16}
111. 4.03
113. 3.57
115. HCl , 4.7 g
117. a. $\text{NaOH}(aq) + \text{KHC}_8\text{H}_4\text{O}_4(aq) \longrightarrow \text{Na}^+(aq) + \text{K}^+(aq) + \text{C}_8\text{H}_4\text{O}_4^{2-}(aq) + \text{H}_2\text{O}(l)$
 b. 0.1046 M
119. 4.73
121. 176 g/mol; 1.0×10^{-4}
123. 14.2 L
125. $1.6 \times 10^{-7} \text{ M}$
127. $8.0 \times 10^{-8} \text{ M}$
129. 6.29
131. 0.172 M
133. The ratio by mass of dimethyl ammonium chloride to dimethyl amine needed is 3.6.
135. 0.18 M benzoic acid, 0.41 M sodium benzoate
137. 51.6 g
139. 1.8×10^{-11} (based on this data)
141. a. $5.5 \times 10^{-25} \text{ M}$
 b. $5.5 \times 10^{-4} \text{ M}$
143. 1.38 L
145. 12.97
147. a. $\text{pH} < \text{pK}_a$ b. $\text{pH} > \text{pK}_a$
 c. $\text{pH} = \text{pK}_a$ d. $\text{pH} > \text{pK}_a$
149. b
151. a. no difference
 b. less soluble
 c. more soluble
157. a. 30.0 mL
 c. $1.0 \times 10^2 \text{ g/mol}$
 e. Trimethylamine

Chapter 18

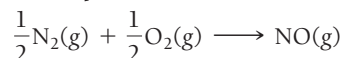
27. a, c
29. System B has the greatest entropy. There is only one energetically equivalent arrangement for System A. However, the particles of System B may exchange positions for a second energetically equivalent arrangement.
31. 29.2 J/K
33. -24.7 J/K
35. a. $\Delta S > 0$ b. $\Delta S < 0$
 c. $\Delta S < 0$ d. $\Delta S < 0$
37. a. $\Delta S_{\text{sys}} > 0$, $\Delta S_{\text{surr}} > 0$, spontaneous at all temperatures
 b. $\Delta S_{\text{sys}} < 0$, $\Delta S_{\text{surr}} < 0$, nonspontaneous at all temperatures
 c. $\Delta S_{\text{sys}} < 0$, $\Delta S_{\text{surr}} < 0$, nonspontaneous at all temperatures
 d. $\Delta S_{\text{sys}} > 0$, $\Delta S_{\text{surr}} > 0$, spontaneous at all temperatures
39. a. $1.29 \times 10^3 \text{ J/K}$
 b. $5.00 \times 10^3 \text{ J/K}$
 c. $-3.83 \times 10^2 \text{ J/K}$
 d. $-1.48 \times 10^3 \text{ J/K}$
41. a. $-649 \text{ J/K} >$, nonspontaneous
 b. 649 J/K, spontaneous
 c. 123 J/K, spontaneous
 d. -76 J/K , nonspontaneous
43. a. $1.93 \times 10^5 \text{ J}$, nonspontaneous
 b. $-1.93 \times 10^5 \text{ J}$, spontaneous
 c. $-3.7 \times 10^4 \text{ J}$, spontaneous
 d. $4.7 \times 10^4 \text{ J}$, nonspontaneous
45. $-2.247 \times 10^6 \text{ J}$, spontaneous
- 47.

ΔH	ΔS	ΔG	Low Temperature	High Temperature
–	+	–	Spontaneous	Spontaneous
–	–	Temperature dependent	Spontaneous	Nonspontaneous
+	+	Temperature dependent	Nonspontaneous	Spontaneous
+		+	Nonspontaneous	Nonspontaneous

49. It increases.
51. a. $\text{CO}_2(g)$, greater molar mass and complexity
 b. $\text{CH}_3\text{OH}(g)$, gas phase
 c. $\text{CO}_2(g)$, greater molar mass and complexity
 d. $\text{SiH}_4(g)$, greater molar mass
 e. $\text{CH}_3\text{CH}_2\text{CH}_3(g)$, greater molar mass and complexity
 f. $\text{NaBr}(aq)$, aqueous
53. a. He, Ne, SO_2 , NH_3 , $\text{CH}_3\text{CH}_2\text{OH}$. From He to Ne there is an increase in molar mass; beyond that, the molecules increase in complexity.
 b. $\text{H}_2\text{O}(s)$, $\text{H}_2\text{O}(l)$, $\text{H}_2\text{O}(g)$; increase in entropy in going from solid to liquid to gas phase
 c. CH_4 , CF_4 , CCl_4 ; increasing entropy with increasing molar mass

55. a. -120.8 J/K , decrease in moles of gas
 b. 133.9 J/K , increase in moles of gas
 c. -42.0 J/K , small change because moles of gas stay constant
 d. -390.8 J/K , decrease in moles of gas
57. -89.3 J/K , decrease in moles of gas
59. $\Delta H^\circ_{\text{rxn}} = -1277 \text{ kJ}$, $\Delta S^\circ_{\text{rxn}} = 313.6 \text{ J/K}$,
 $\Delta G^\circ_{\text{rxn}} = -1.370 \times 10^3 \text{ kJ}$; yes
61. a. $\Delta H^\circ_{\text{rxn}} = 57.2 \text{ kJ}$, $\Delta S^\circ_{\text{rxn}} = 175.8 \text{ J/K}$,
 $\Delta G^\circ_{\text{rxn}} = 4.8 \times 10^3 \text{ J/mol}$; nonspontaneous, becomes spontaneous at high temperatures
 b. $\Delta H^\circ_{\text{rxn}} = 176.2 \text{ kJ}$, $\Delta S^\circ_{\text{rxn}} = 285.1 \text{ J/K}$, $\Delta G^\circ_{\text{rxn}} = 91.2 \text{ kJ}$; nonspontaneous, becomes spontaneous at high temperatures
 c. $\Delta H^\circ_{\text{rxn}} = 98.8 \text{ kJ}$, $\Delta S^\circ_{\text{rxn}} = 141.5 \text{ J/K}$, $\Delta G^\circ_{\text{rxn}} = 56.6 \text{ kJ}$; nonspontaneous, becomes spontaneous at high temperatures
 d. $\Delta H^\circ_{\text{rxn}} = -91.8 \text{ kJ}$, $\Delta S^\circ_{\text{rxn}} = -198.1 \text{ J/K}$, $\Delta G^\circ_{\text{rxn}} = -32.8 \text{ kJ}$; spontaneous
63. a. 2.8 kJ b. 91.2 kJ
 c. 56.4 kJ d. -32.8 kJ
 Values are comparable. The method using ΔH° and ΔS° can be used to determine how ΔG° changes with temperature.
65. a. -72.5 kJ , spontaneous
 b. -11.4 kJ , spontaneous
 c. 9.1 kJ , nonspontaneous
67. -29.4 kJ
69. a. 19.3 kJ
 b. (i) 2.9 kJ
 (ii) -2.9 kJ
 c. The partial pressure of iodine is very low.
71. 11.9 kJ
73. a. 1.48×10^{90} b. 2.09×10^{-26}
75. a. -24.8 kJ b. 0 c. 9.4 kJ
77. a. 1.90×10^{47} b. 1.51×10^{-13}
79. $\Delta H^\circ = 50.6 \text{ kJ}$ $\Delta S^\circ = 226 \text{ J/K}$
81. 4.8
83. a. + b. - c. -
85. a. $\Delta G^\circ = 175.2 \text{ kJ}$, $K = 1.95 \times 10^{-31}$, nonspontaneous
 b. 133 kJ , yes
87. Cl_2 : $\Delta H^\circ_{\text{rxn}} = -182.1 \text{ kJ}$, $\Delta S^\circ_{\text{rxn}} = -134.4 \text{ J/K}$,
 $\Delta G^\circ_{\text{rxn}} = -142.0 \text{ kJ}$ $K = 7.94 \times 10^{24}$
 Br_2 : $\Delta H^\circ_{\text{rxn}} = -121.6 \text{ kJ}$, $\Delta S^\circ_{\text{rxn}} = -134.2 \text{ J/K}$,
 $\Delta G^\circ_{\text{rxn}} = -81.6 \text{ kJ}$ $K = 2.02 \times 10^{14}$
 I_2 : $\Delta H^\circ_{\text{rxn}} = -48.3 \text{ kJ}$, $\Delta S^\circ_{\text{rxn}} = -132.2 \text{ J/K}$,
 $\Delta G^\circ_{\text{rxn}} = -8.9 \text{ kJ}$ $K = 37$
 Cl_2 is the most spontaneous, I_2 is the least. Spontaneity is determined by the standard enthalpy of formation of the dihalogenated ethane. Higher temperatures make the reactions less spontaneous.
89. a. 107.8 kJ b. $5.0 \times 10^{-7} \text{ atm}$
 c. spontaneous at higher temperatures, $T = 923.4 \text{ K}$
91. a. 2.22×10^5 b. 94.4 mol
93. a. $\Delta G^\circ = -689.6 \text{ kJ}$, ΔG° becomes less negative
 b. $\Delta G^\circ = -665.2 \text{ kJ}$, ΔG° becomes less negative
 c. $\Delta G^\circ = -632.4 \text{ kJ}$, ΔG° becomes less negative
 d. $\Delta G^\circ = -549.3 \text{ kJ}$, ΔG° becomes less negative
95. With one exception, the formation of any oxide of nitrogen at 298 K requires more moles of gas as reactants than are formed

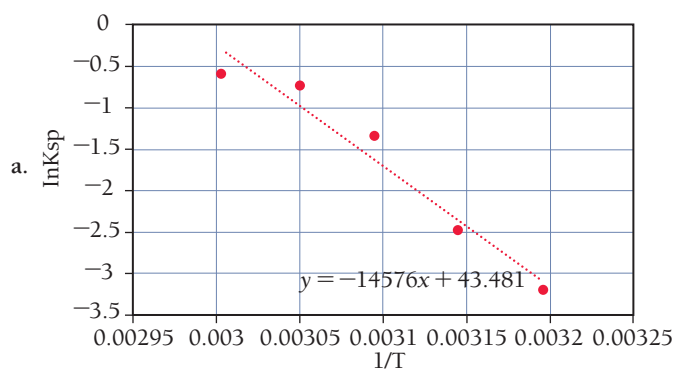
as products. For example, 1 mol of N_2O requires 0.5 mol of O_2 and 1 mol of N_2 , 1 mol of N_2O_3 requires 1 mol of N_2 and 1.5 mol of O_2 , and so on. The exception is NO , where 1 mol of NO requires 0.5 mol of O_2 and 0.5 mol of N_2 :



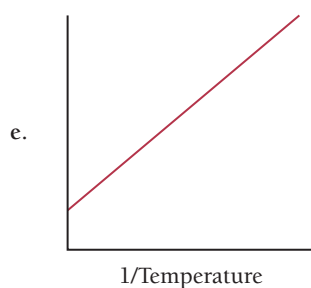
This reaction has a positive ΔS because what is essentially mixing of the N and O has taken place in the product.

97. 15.0 kJ
99. a. Positive, the process is spontaneous. It is slow unless a spark is applied.
 b. Positive, although the change in the system is not spontaneous; the overall change, which includes such processes as combustion or water flow to generate electricity, is spontaneous.
 c. Positive, the acorn oak/tree system is becoming more ordered, so the processes associated with growth are not spontaneous. But they are driven by spontaneous processes such as the generation of heat by the sun and the reactions that produce energy in the cell.
101. At 18.3 mmHg $\Delta G = 0$, At 760 mmHg $\Delta G^\circ = 55.4 \text{ kJ}$
103. a. 3.24×10^{-3}
 b. $\text{NH}_3 + \text{ATP} + \text{H}_2\text{O} \longrightarrow \text{NH}_3\text{—P}_i + \text{ADP}$
 $\text{NH}_3\text{—P}_i + \text{C}_5\text{H}_8\text{O}_4\text{N}^- \longrightarrow \text{C}_5\text{H}_9\text{O}_3\text{N}_2 + \text{P}_i + \text{H}_2\text{O}$
 $\text{NH}_3 + \text{C}_5\text{H}_8\text{O}_4\text{N}^- + \text{ATP} \longrightarrow \text{C}_5\text{H}_9\text{O}_3\text{N}_2 + \text{ADP} + \text{P}_i$
 $\Delta G^\circ = -16.3 \text{ kJ}$, $K = 7.20 \times 10^2$
105. a. -95.3 kJ/mol . Since the numbers of moles of reactants and products are the same, the decrease in volume affects the entropy of both equally, so there is no change in ΔG .
 b. 102.8 kJ/mol . The entropy of the reactants (1.5 mol) is decreased more than the entropy of the product (1 mol). Since the product is relatively more favored at lower volume, ΔG is less positive.
 c. 204.2 kJ/mol . The entropy of the product (1 mol) is decreased more than the entropy of the reactant (0.5 mol). Since the product is relatively less favored, ΔG is more positive.
107. $\Delta H^\circ = -93 \text{ kJ}$, $\Delta S^\circ = -2.0 \times 10^2 \text{ J/K}$
109. ΔS_{vap} diethyl ether = 86.1 J/mol K , ΔS_{vap} acetone = 88.4 J/mol K , ΔS_{vap} benzene = 87.3 J/mol K , ΔS_{vap} chloroform = 88.0 J/mol K . Because water and ethanol hydrogen bond, they are more ordered in the liquid and we expect ΔS_{vap} to be more positive. Ethanol $38600/351.0 = 110 \text{ J/mol K}$, $\text{H}_2\text{O} = 40700/373.2 = 109 \text{ J/mol K}$
111. a and c will both increase the entropy of the surroundings because they are both exothermic reactions (adding thermal energy to the surroundings).
113. c. If entropy of a system is increasing, the enthalpy of a reaction can be overcome (if necessary) by the entropy change as long as the temperature is high enough. If the entropy change of the system is decreasing, the reaction must be exothermic in order to be spontaneous since the entropy is working against spontaneity.
115. a and b are both true. Since $\Delta G_{\text{rxn}} = \Delta G^\circ_{\text{rxn}} + R T \ln Q$ and $\Delta G^\circ_{\text{rxn}} = -42.5 \text{ kJ}$, in order for $\Delta G_{\text{rxn}} = 0$ the second term must be positive. This necessitates that $Q > 1$ or that we have more product than reactant. Any reaction at equilibrium has $\Delta G_{\text{rxn}} = 0$.

122.



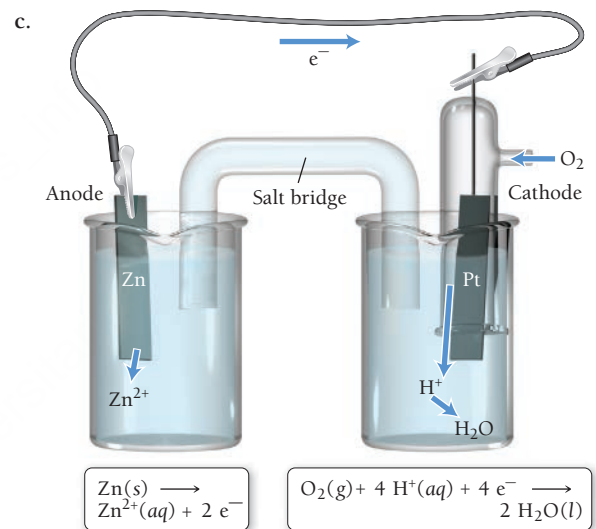
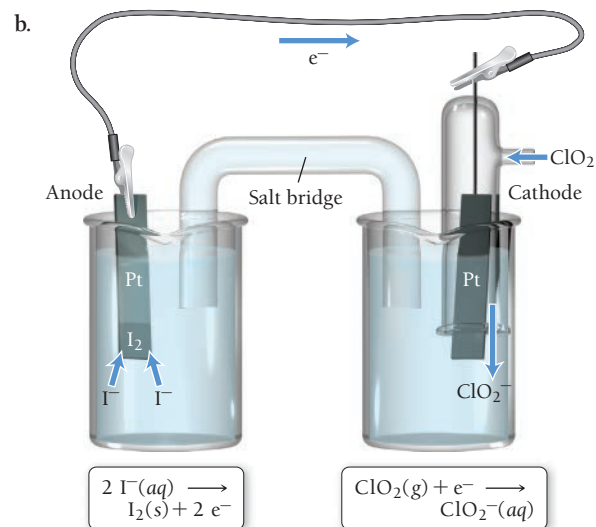
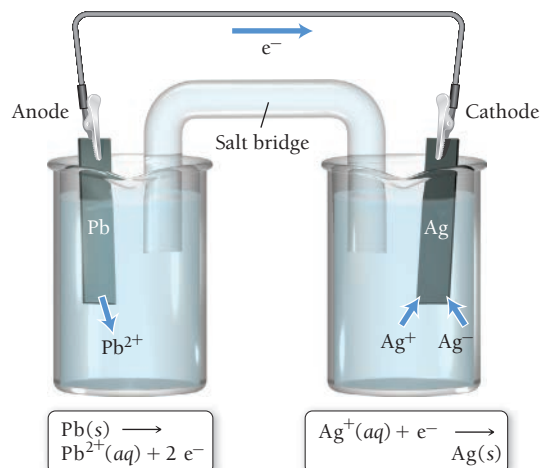
c. 362 J/K



Chapter 19

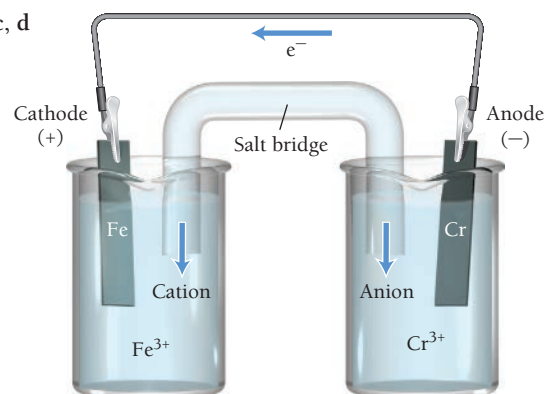
33. a. $3 \text{ K(s)} + \text{Cr}^{3+}(\text{aq}) \longrightarrow \text{Cr(s)} + 3 \text{ K}^+(\text{aq})$
 b. $2 \text{ Al(s)} + 3 \text{ Fe}^{2+}(\text{aq}) \longrightarrow 2 \text{ Al}^{3+}(\text{aq}) + 3 \text{ Fe(s)}$
 c. $2 \text{ BrO}_3^-(\text{aq}) + 3 \text{ N}_2\text{H}_4(\text{g}) \longrightarrow 2 \text{ Br}^-(\text{aq}) + 3 \text{ N}_2(\text{g}) + 6 \text{ H}_2\text{O(l)}$
35. a. $\text{PbO}_2(\text{s}) + 2 \text{ I}^-(\text{aq}) + 4 \text{ H}^+(\text{aq}) \longrightarrow \text{Pb}^{2+}(\text{aq}) + \text{I}_2(\text{s}) + 2 \text{ H}_2\text{O(l)}$
 b. $5 \text{ SO}_3^{2-}(\text{aq}) + 2 \text{ MnO}_4^-(\text{aq}) + 6 \text{ H}^+(\text{aq}) \longrightarrow 5 \text{ SO}_4^{2-}(\text{aq}) + 2 \text{ Mn}^{2+}(\text{aq}) + 3 \text{ H}_2\text{O(l)}$
 c. $\text{S}_2\text{O}_3^{2-}(\text{aq}) + 4 \text{ Cl}_2(\text{g}) + 5 \text{ H}_2\text{O(l)} \longrightarrow 2 \text{ SO}_4^{2-}(\text{aq}) + 8 \text{ Cl}^-(\text{aq}) + 10 \text{ H}^+(\text{aq})$
37. a. $\text{H}_2\text{O}_2(\text{aq}) + 2 \text{ ClO}_2(\text{aq}) + 2 \text{ OH}^-(\text{aq}) \longrightarrow \text{O}_2(\text{g}) + 2 \text{ ClO}_2^-(\text{aq}) + 2 \text{ H}_2\text{O(l)}$
 b. $\text{Al(s)} + \text{MnO}_4^-(\text{aq}) + 2 \text{ H}_2\text{O(l)} \longrightarrow \text{Al(OH)}_4^-(\text{aq}) + \text{MnO}_2(\text{s})$
 c. $\text{Cl}_2(\text{g}) + 2 \text{ OH}^-(\text{aq}) \longrightarrow \text{Cl}^-(\text{aq}) + \text{ClO}^-(\text{aq}) + \text{H}_2\text{O(l)}$

39. a.

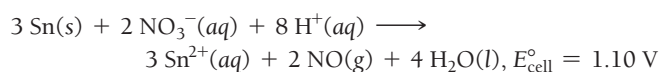
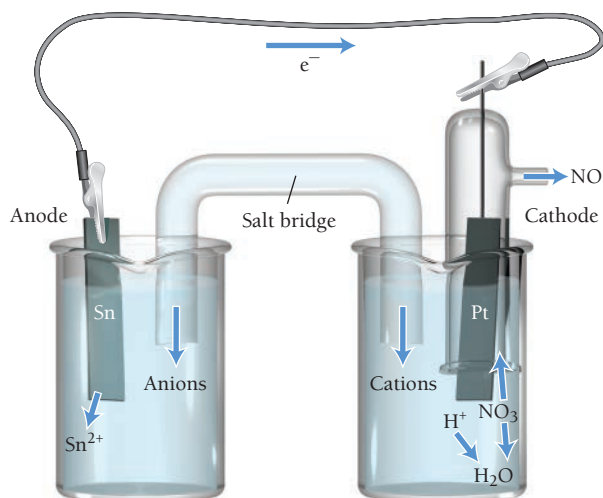


41. a. 0.93 V b. 0.41 V c. 1.99 V

43. a, c, d

b. $\text{Cr(s)} + \text{Fe}^{3+}(\text{aq}) \longrightarrow \text{Cr}^{3+}(\text{aq}) + \text{Fe(s)}, E_{\text{cell}}^\circ = 0.69 \text{ V}$ 45. a. $\text{Pb(s)} | \text{Pb}^{2+}(\text{aq}) || \text{Ag}^+(\text{aq}) | \text{Ag(s)}$ b. $\text{Pt(s)}, \text{I}_2(\text{s}) | \text{I}^-(\text{aq}) || \text{ClO}_2^-(\text{aq}) | \text{ClO}_2(\text{g}) | \text{Pt(s)}$ c. $\text{Zn(s)} | \text{Zn}^{2+}(\text{aq}) || \text{H}_2\text{O(l)} | \text{H}^+(\text{aq}) | \text{O}_2(\text{g}) | \text{Pt(s)}$

47.



49. b, c occur spontaneously in the forward direction.

51. aluminum

53. a. yes, $2 \text{ Al}(s) + 6 \text{ H}^+(aq) \longrightarrow 2 \text{ Al}^{3+}(aq) + 3 \text{ H}_2(g)$

b. no

c. yes, $\text{Pb}(s) + 2 \text{ H}^+(aq) \longrightarrow \text{Pb}^{2+}(aq) + \text{H}_2(g)$

55. a. yes, $3 \text{ Cu}(s) + 2 \text{ NO}_3^-(aq) + 8 \text{ H}^+(aq) \longrightarrow 3 \text{ Cu}^{2+}(aq) + 2 \text{ NO}(g) + 4 \text{ H}_2\text{O}(l)$

b. no

57. a. -1.70 V , nonspontaneous

b. 1.97 V , spontaneous

c. -1.51 , nonspontaneous

59. a

61. a. -432 kJ b. 52 kJ c. $-1.7 \times 10^2 \text{ kJ}$

63. a. 5.31×10^{75} b. 7.7×10^{-10} c. 6.3×10^{29}

65. 5.6×10^5

67. $\Delta G^\circ = -7.97 \text{ kJ}$, $E_{\text{cell}}^\circ = 0.041 \text{ V}$

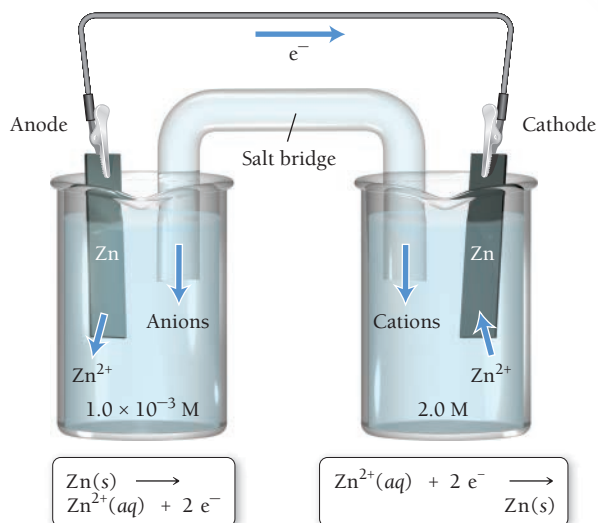
69. a. 1.04 V b. 0.97 V c. 1.11 V

71. 1.87 V

73. a. 0.56 V b. 0.52 V

c. $[\text{Ni}^{2+}] = 0.003 \text{ M}$, $[\text{Zn}^{2+}] = 1.60 \text{ M}$

75.



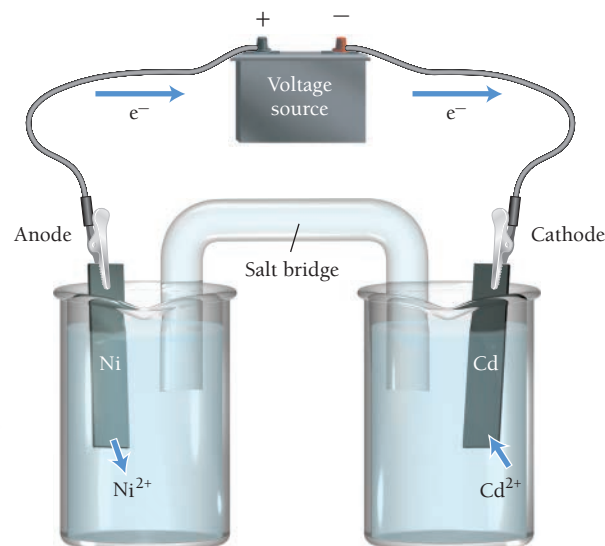
77. $\frac{[\text{Sn}^{2+}](\text{ox})}{[\text{Sn}^{2+}](\text{red})} = 4.2 \times 10^{-4}$

79. 0.3762

81. 1.038 V

83. a, c would prevent the corrosion of iron

85.


minimum voltage = 0.17 V

87. oxidation: $2 \text{ Br}^-(l) \longrightarrow \text{Br}_2(g) + 2 e^-$

reduction: $\text{K}^+(l) + e^- \longrightarrow \text{K}(l)$

89. oxidation: $2 \text{ Br}^-(l) \longrightarrow \text{Br}_2(g) + 2 e^-$

reduction: $\text{K}^+(l) + e^- \longrightarrow \text{K}(l)$

91. a. anode: $2 \text{ Br}^- \longrightarrow \text{Br}_2(l) + 2 e^-$

cathode: $2 \text{ H}_2\text{O}(l) + 2 e^- \longrightarrow \text{H}_2(g) + 2 \text{ OH}^-(aq)$

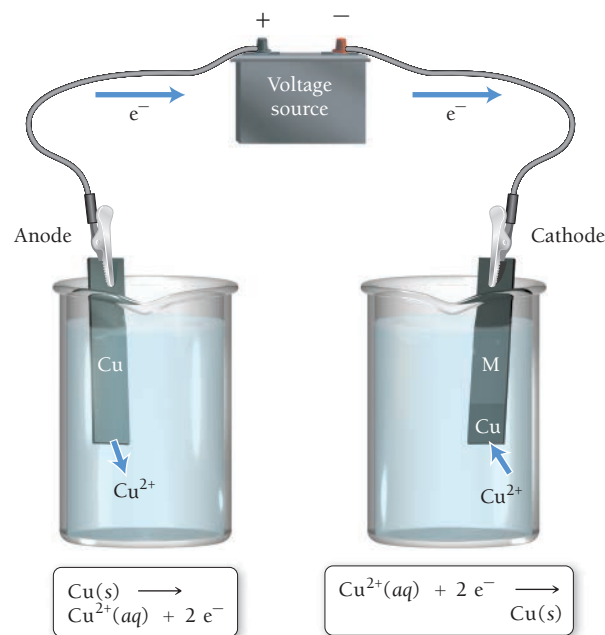
b. anode: $2 \text{ I}^-(aq) \longrightarrow \text{I}_2(s) + 2 e^-$

cathode: $\text{Pb}^{2+}(aq) + 2 e^- \longrightarrow \text{Pb}(s)$

c. anode: $2 \text{ H}_2\text{O}(l) \longrightarrow \text{O}_2(g) + 4 \text{ H}^+(aq) + 4 e^-$

cathode: $2 \text{ H}_2\text{O}(l) + 2 e^- \longrightarrow \text{H}_2(g) + 2 \text{ OH}^-(aq)$

93.

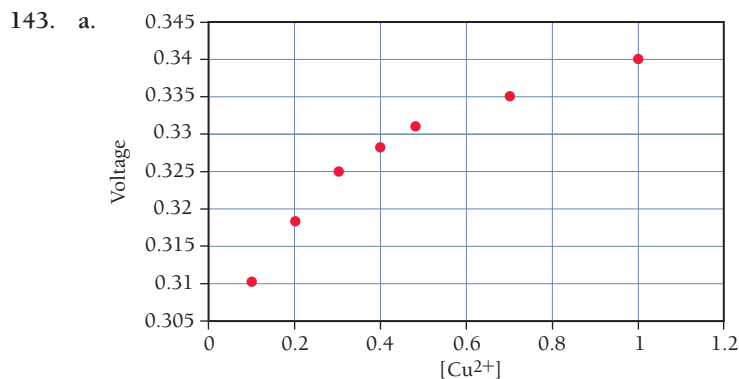

95. $1.8 \times 10^2 \text{ s}$

97. $1.2 \times 10^3 \text{ A}$
 99. $2 \text{ MnO}_4^-(aq) + 5 \text{ Zn}(s) + 16 \text{ H}^+(aq) \longrightarrow 2 \text{ Mn}^{2+}(aq) + 5 \text{ Zn}^{2+}(aq) + 8 \text{ H}_2\text{O}(l)$ 34.9 mL
 101. The drawing should show that several Al atoms dissolve into solution as Al^{3+} ions and that several Cu^{2+} ions are deposited on the Al surface as solid Cu.
 103. a. 68.3 mL
 b. cannot be dissolved
 c. cannot be dissolved
 105. 0.25
 107. $E_{\text{cell}}^\circ = 0.0726 \text{ V}$; $K = 284$

$[\text{B}^{2+}]$	$[\text{A}^{2+}]$	Q	E_{cell}	ΔG_{rxn}
1.00	1.00	1.00	0.0726 V	-14.0 kJ
1.00	1.00×10^{-4}	1.00×10^{-4}	0.191	-36.8 kJ
1.00×10^{-4}	1.00	1.00×10^4	-0.0458	8.82 kJ
3.52×10^{-3}	1.00	284	0	0

109. There are no paired reactions that produce more than about 5 or 6 V.
 111. a. 2.83 V b. 2.71 V c. 16 hr
 113. 176 h
 115. 0.71 V
 117. a. $\Delta G^\circ = 461 \text{ kJ}$, $K = 1.4 \times 10^{-81}$
 b. $\Delta G^\circ = 2.7 \times 10^2 \text{ kJ}$, $K = 2.0 \times 10^{-48}$
 119. MCl_4
 121. 51.3%
 123. $\text{pH} = 0.85$
 125. 0.83 M
 127. $4.1 \times 10^5 \text{ L}$
 129. 435 s
 131. 8.39% U
 133. The overall cell reaction for both cells is $2 \text{ Cu}^+(aq) \longrightarrow \text{Cu}^{2+}(aq) + \text{Cu}(s)$. The difference in E° is because $n = 1$ for the first cell and $n = 2$ for the second cell. For both cells, $\Delta G^\circ = -35.1 \text{ kJ}$.

135. a
 137. $\Delta G_{\text{rxn}}^\circ$ is positive and E_{cell}° is negative.



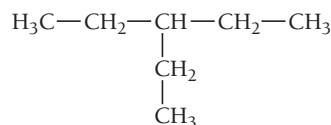
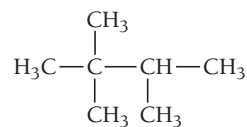
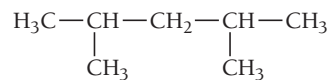
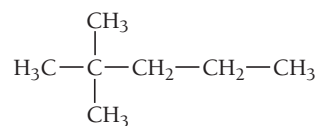
The graph is not linear.

- c. Slope = 0.0298; intercept = 0.340; yes the slope should be 0.0592/ n and the intercept should be E_{cell}° .

Chapter 20

31. a. ${}_{92}^{234}\text{U} \longrightarrow {}_2^4\text{He} + {}_{90}^{230}\text{Th}$
 b. ${}_{90}^{230}\text{Th} \longrightarrow {}_2^4\text{He} + {}_{88}^{226}\text{Ra}$
 c. ${}_{82}^{214}\text{Pb} \longrightarrow {}_{-1}^0\text{e} + {}_{83}^{214}\text{Bi}$
 d. ${}_{7}^{13}\text{N} \longrightarrow {}_{+1}^0\text{e} + {}_6^{13}\text{C}$
 e. ${}_{24}^{51}\text{Cr} + {}_{+1}^0\text{e} \longrightarrow {}_{23}^{51}\text{V}$
 33. ${}_{90}^{232}\text{Th} \longrightarrow {}_2^4\text{He} + {}_{88}^{228}\text{Ra}$
 ${}_{88}^{228}\text{Ra} \longrightarrow {}_{-1}^0\text{e} + {}_{89}^{228}\text{Ac}$
 ${}_{89}^{228}\text{Ac} \longrightarrow {}_{-1}^0\text{e} + {}_{90}^{228}\text{Th}$
 ${}_{90}^{228}\text{Th} \longrightarrow {}_2^4\text{He} + {}_{88}^{224}\text{Ra}$
 35. a. ${}_{87}^{221}\text{Fr}$ b. ${}_{-1}^0\text{e}$
 c. ${}_{+1}^0\text{e}$ d. ${}_{-1}^0\text{e}$
 37. a. stable, N/Z ratio is close to 1, acceptable for low Z atoms
 b. not stable, N/Z ratio much too high for low Z atom
 c. not stable, N/Z ratio is less than 1, much too low
 d. stable, N/Z ratio is acceptable for this Z
 39. Sc, V, and Mn, each have odd numbers of protons. Atoms with an odd number of protons typically have less stable isotopes than those with an even number of protons.
 41. a. beta decay b. positron emission
 c. positron emission d. positron emission
 43. a. Cs-125
 b. Fe-62
 45. $2.34 \times 10^9 \text{ yr}$
 47. 0.57 g
 49. 10.8 hr
 51. $2.66 \times 10^3 \text{ yr}$
 53. $2.4 \times 10^4 \text{ yr}$
 55. $2.7 \times 10^9 \text{ yr}$
 57. ${}_{92}^{235}\text{U} + {}_0^1\text{n} \longrightarrow {}_{54}^{144}\text{Xe} + {}_{38}^{90}\text{Sr} + 2 {}_0^1\text{n}$
 59. ${}_1^2\text{H} + {}_1^2\text{H} \longrightarrow {}_2^3\text{He} + {}_0^1\text{n}$
 61. ${}_{92}^{238}\text{U} + {}_0^1\text{n} \longrightarrow {}_{92}^{239}\text{U}$
 ${}_{92}^{239}\text{U} \longrightarrow {}_{93}^{239}\text{Np} + {}_{-1}^0\text{e}$
 ${}_{93}^{239}\text{Np} \longrightarrow {}_{94}^{239}\text{Pu} + {}_{-1}^0\text{e}$
 63. ${}_{98}^{249}\text{Cf} + {}_6^{12}\text{C} \longrightarrow {}_{104}^{257}\text{Rf} + 4 {}_0^1\text{n}$
 65. $9.0 \times 10^{13} \text{ J}$
 67. a. mass defect = 0.13701 amu
 binding energy = 7.976 MeV/nucleon
 b. mass defect = 0.54369 amu
 binding energy = 8.732 MeV/nucleon
 c. mass defect = 1.16754 amu
 binding energy = 8.431 MeV/nucleon
 69. $7.228 \times 10^{10} \text{ J/g U-235}$
 71. $7.84 \times 10^{10} \text{ J/g H-2}$
 73. radiation: 25 J, fall: 370 J
 75. 68 mi
 77. a. ${}_1^1\text{p} + {}_4^9\text{Be} \longrightarrow {}_3^6\text{Li} + {}_2^4\text{He}$
 $1.03 \times 10^{11} \text{ J/mol}$
 b. ${}_{83}^{209}\text{Bi} + {}_{28}^{64}\text{Ni} \longrightarrow {}_{111}^{272}\text{Rg} + {}_0^1\text{n}$
 $1.141 \times 10^{13} \text{ J/mol}$
 c. ${}_{74}^{179}\text{W} + {}_{-1}^0\text{e} \longrightarrow {}_{73}^{179}\text{Ta}$
 $7.59 \times 10^{10} \text{ J/mol}$

79. a. ${}^{114}_{44}\text{Ru} \longrightarrow {}^0_{-1}\text{e} + {}^{114}_{45}\text{Rh}$
 b. ${}^{216}_{88}\text{Ra} \longrightarrow {}^0_{+1}\text{e} + {}^{216}_{87}\text{Fr}$
 c. ${}^{58}_{30}\text{Zn} \longrightarrow {}^0_{+1}\text{e} + {}^{58}_{29}\text{Cu}$
 d. ${}^{31}_{10}\text{Ne} \longrightarrow {}^0_{-1}\text{e} + {}^{31}_{11}\text{Na}$
81. 2.9×10^{21} beta emissions, 3700 Ci
83. 1.6×10^{-5} L
85. 4.94×10^7 kJ/mol
87. 7.72 MeV
89. ${}^{14}_7\text{N}$
91. 0.15%
93. 1.24×10^{21} atoms
95. 2.42×10^{-12} m
97. -0.7 MeV, there is no coulombic barrier for collision with a neutron.
99. a. 1.164×10^{10} kJ b. 0.1299 g
101. U-235 forms Pb-207 in seven α -decays and four β -decays, and Th-232 forms Pb-208 in six α -decays and four β -decays.
103. 3.0×10^2 K
105. ${}^{21}_9\text{F} \longrightarrow {}^{21}_{10}\text{Ne} + {}^0_{-1}\text{e}$
107. Nuclide A is more dangerous because the half-life is shorter (18.5 days) and so it decays faster.
109. Iodine is used by the thyroid gland to make hormones. Normally, we ingest iodine in foods, especially iodized salt. The thyroid gland cannot tell the difference between stable and radioactive iodine and will absorb both. KI tablets work by blocking radioactive iodine from entering the thyroid. When a person takes KI, the stable iodine in the tablet gets absorbed by the thyroid. Because KI contains so much stable iodine, the thyroid gland becomes "full" and cannot absorb any more iodine—either stable or radioactive—for the next 24 hours.
115. a. 0.34 g at 200 minutes; 0.23 g at 400 minutes
 b. 0.63 μg



37. a. no b. yes c. yes d. no

39. a. enantiomers

- b. same
 c. enantiomers

41. a. pentane
 b. 2-methylbutane
 c. 4-isopropyl-2-methylheptane
 d. 4-ethyl-2-methylhexane

43. a. $\begin{array}{c} \text{CH}_3-\text{CH}_2-\text{CH}-\text{CH}_2-\text{CH}_2-\text{CH}_3 \\ | \\ \text{CH}_2-\text{CH}_3 \end{array}$

- b. $\begin{array}{c} \text{CH}_3 \\ | \\ \text{CH}_3-\text{CH}_2-\text{C}-\text{CH}_2-\text{CH}_3 \\ | \\ \text{CH}_2-\text{CH}_3 \end{array}$

- c. $\begin{array}{c} \text{CH}_3-\text{CH}-\text{CH}-\text{CH}_3 \\ | \qquad | \\ \text{CH}_3 \text{CH}_3 \end{array}$

- d. $\begin{array}{c} \text{CH}_3 \qquad \qquad \qquad \text{CH}_2-\text{CH}_3 \\ | \qquad \qquad \qquad | \\ \text{CH}_3-\text{C}-\text{CH}_2-\text{CH}-\text{CH}_2-\text{CH}_2-\text{CH}-\text{CH}_2-\text{CH}_3 \\ | \qquad \qquad | \\ \text{CH}_3 \text{CH}_2-\text{CH}_3 \end{array}$

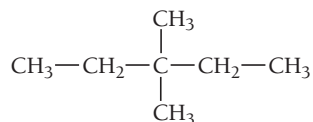
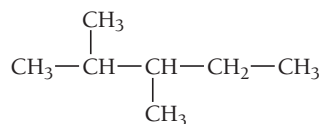
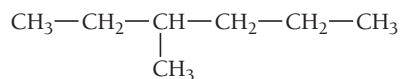
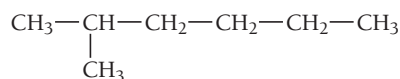
45. a. $\text{CH}_3\text{CH}_2\text{CH}_3 + 5 \text{O}_2 \longrightarrow 3 \text{CO}_2 + 4 \text{CO}_2$
 b. $\text{CH}_3\text{CH}_2\text{CH}_3 + 6 \text{O}_2 \longrightarrow 4 \text{CO}_2 + 4 \text{H}_2\text{O}$
 c. $2 \text{CH}\equiv\text{CH} + 5 \text{O}_2 \longrightarrow 4 \text{CO}_2 + 2 \text{H}_2\text{O}$


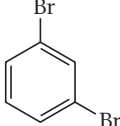
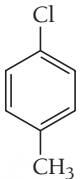
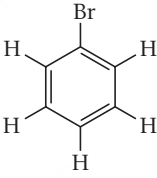
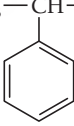
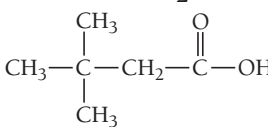
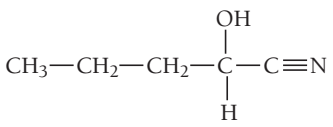
47. a. $\text{CH}_3\text{CH}_2\text{Br}$
 b. $\text{CH}_3\text{CH}_2\text{CH}_2\text{Cl}$, $\text{CH}_3\text{CHClCH}_3$
 c. CHCl_2Br

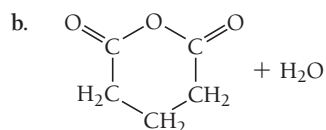
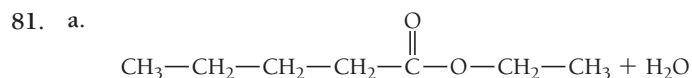
- d. $\begin{array}{c} \text{H} \\ | \\ \text{CH}_3-\text{C}-\text{CH}_2-\text{Cl} \\ | \\ \text{CH}_3 \\ | \\ \text{Cl} \\ | \\ \text{CH}_3-\text{C}-\text{CH}_3 \\ | \\ \text{CH}_3 \end{array}$

Chapter 21

33. a. alkane b. alkene
 c. alkyne d. alkene
35. $\text{CH}_3-\text{CH}_2-\text{CH}_2-\text{CH}_2-\text{CH}_2-\text{CH}_2-\text{CH}_3$



49. $\text{CH}_2=\text{CH}-\text{CH}_2-\text{CH}_2-\text{CH}_2-\text{CH}_3$
 $\text{CH}_3-\text{CH}=\text{CH}-\text{CH}_2-\text{CH}_2-\text{CH}_3$
 $\text{CH}_3-\text{CH}_2-\text{CH}=\text{CH}-\text{CH}_2-\text{CH}_3$
51. a. 1-butene
 b. 3,4-dimethyl-2-pentene
 c. 3-isopropyl-1-hexene
 d. 2,4-dimethyl-3-hexene
53. a. 2-butyne
 b. 4,4-dimethyl-2-hexyne
 c. 3-isopropyl-1-hexyne
 d. 3,6-dimethyl-4-nonyne
55. a. $\text{CH}_3-\text{CH}_2-\text{CH}-\text{C}\equiv\text{C}-\text{CH}_2-\text{CH}_2-\text{CH}_3$
 b. $\text{CH}_3-\text{CH}_2-\text{CH}=\text{CH}-\text{CH}_2-\text{CH}_2-\text{CH}_2-\text{CH}_2-\text{CH}_3$
 c. $\text{CH}\equiv\text{C}-\text{C}(\text{CH}_3)_2-\text{CH}_2-\text{CH}_3$
 d. $\text{CH}_3-\text{CH}=\text{C}(\text{CH}_3)-\text{CH}_2-\text{CH}(\text{CH}_2\text{CH}_3)-\text{CH}(\text{CH}_3)-\text{CH}_3$
57. a. $\text{CH}_3-\text{CH}(\text{Cl})-\text{CH}(\text{Cl})-\text{CH}_3$
 b. $\text{CH}_3-\text{CH}(\text{CH}_3)-\text{CH}_2-\text{CH}(\text{Br})-\text{CH}_3 + \text{CH}_3-\text{CH}(\text{CH}_3)-\text{CH}(\text{Br})-\text{CH}_2-\text{CH}_3$
 c. $\text{CH}_3-\text{CH}_2-\text{CH}(\text{Br})-\text{CH}(\text{Br})-\text{CH}_3$
 d. $\text{CH}_3-\text{CH}(\text{CH}_3)-\text{CH}_2-\text{C}(\text{CH}_3)(\text{Cl})-\text{CH}_3$
59. a. $\text{CH}_2=\text{CH}-\text{CH}_3 + \text{H}_2 \longrightarrow \text{CH}_3-\text{CH}_2-\text{CH}_3$
 b. $\text{CH}_3-\text{CH}(\text{CH}_3)-\text{CH}=\text{CH}_2 + \text{H}_2 \longrightarrow \text{CH}_3-\text{CH}(\text{CH}_3)-\text{CH}_2-\text{CH}_3$
 c. $\text{CH}_3-\text{CH}(\text{CH}_3)-\text{C}(\text{CH}_3)=\text{CH}_2 + \text{H}_2 \longrightarrow \text{CH}_3-\text{CH}(\text{CH}_3)-\text{CH}(\text{CH}_3)-\text{CH}_3$
61. a. methylbenzene or toluene
 b. bromobenzene
 c. chlorobenzene
63. a. 3,5-dimethyl-7-phenylnonane
 b. 2-phenyl-3-octene
 c. 4,5-dimethyl-6-phenyl-2-octyne
65. a. 1,4-dibromobenzene or *p*-dibromobenzene
 b. 1,3-diethylbenzene or *m*-diethylbenzene
 c. 1-chloro-2-fluorobenzene or *o*-chlorofluorobenzene
67. a. 
 b. 
 c. 
69. a.  + HBr
 b.  + HCl
71. a. 1-propanol
 b. 4-methyl-2-hexanol
 c. 2,6-dimethyl-4-heptanol
 d. 3-methyl-3-pentanol
73. a. $\text{CH}_3\text{CH}_2\text{CH}_2\text{Br} + \text{H}_2\text{O}$
 b. $\text{CH}_3-\text{C}(\text{CH}_3)=\text{CH}_2 + \text{H}_2\text{O}$
 c. $\text{CH}_3\text{CH}_2\text{ONa} + \frac{1}{2}\text{H}_2$
 d. 
75. a. butanone
 b. pentanal
 c. 3,5,5-trimethylhexanal
 d. 4-methyl-2-hexanone
77. 
79. a. methylbutanoate
 b. propanoic acid
 c. 5-methylhexanoic acid
 d. ethylpentanoate



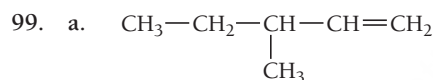
83. a. ethyl propyl ether b. ethyl pentyl ether
c. dipropyl ether d. butyl ethyl ether
85. a. diethylamine b. methylpropylamine
c. butylmethylpropylamine
87. a. acid-base, $(\text{CH}_3)_2\text{NH}_2^+(aq) + \text{Cl}^-(aq)$
b. condensation, $\text{CH}_3\text{CH}_2\text{CONHCH}_2\text{CH}_3(aq) + \text{H}_2\text{O}$
c. acid-base, $\text{CH}_3\text{NH}_3^+(aq) + \text{HSO}_4^-(aq)$
89. a. ester, methyl 3-methylbutanoate
b. ether, ethyl 2-methylbutyl ether
c. aromatic, 1-ethyl-3-methylbenzene or *m*-ethylmethylbenzene
d. alkyne, 5-ethyl-4-methyl-2-heptyne
e. aldehyde, butanal
f. alcohol, 2-methyl-1-propanol

91. a. 5-isobutyl-3-methylnonane
b. 5-methyl-3-hexanone
c. 3-methyl-2-butanol
d. 4-ethyl-3,5-dimethyl-1-hexyne

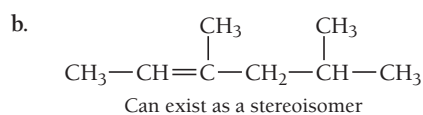
93. a. isomers b. isomers c. same

95. 558 g

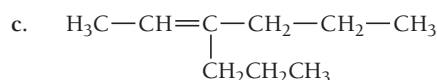
97. a. combustion b. alkane substitution
c. alcohol elimination d. aromatic substitution



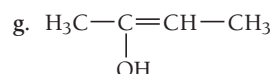
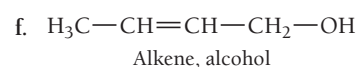
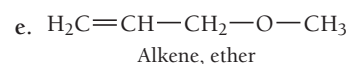
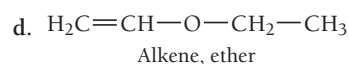
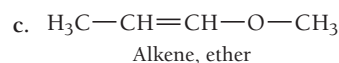
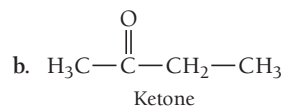
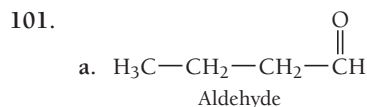
Can exist as a stereoisomer



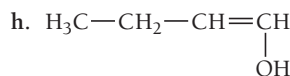
Can exist as a stereoisomer



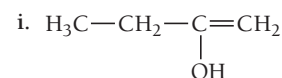
Can exist as a stereoisomer



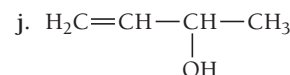
Alkene, alcohol



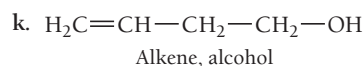
Alkene, alcohol



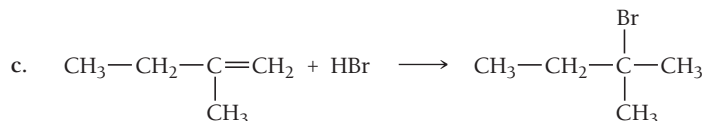
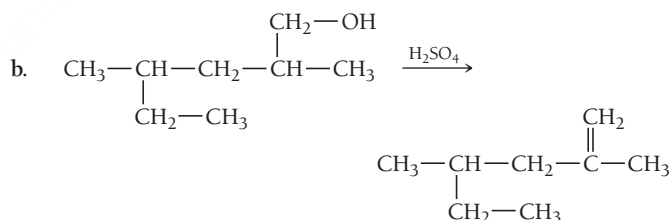
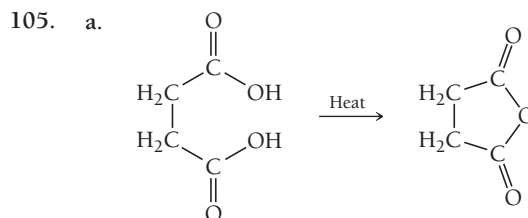
Alkene, alcohol



Alkene, alcohol

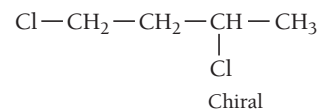
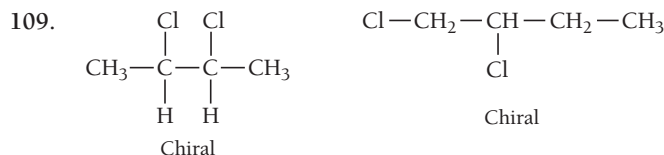


103. In the acid form of the carboxylic acid, electron withdrawal by the C=O enhances acidity. The conjugate base, the carboxylate anion, is stabilized by resonance, so the two O atoms are equivalent and bear the negative charge equally.



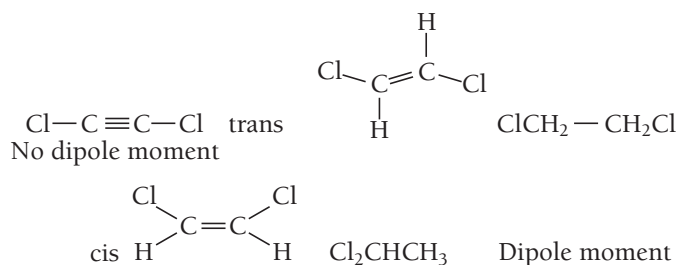
107. a. 3:1

- b. 2° hydrogen atoms are more reactive. The reactivity of 2° hydrogens to 1° hydrogens is 11:3.

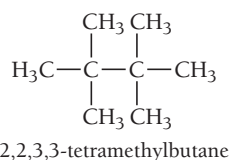


111. The first propagation step for F is very rapid and exothermic because of the strength of the H—F bond that forms. For I the first propagation step is endothermic and slow because the H—I bond that forms is relatively weak.

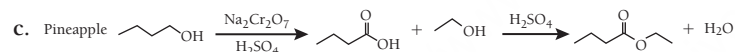
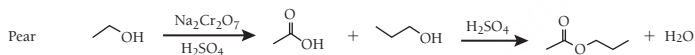
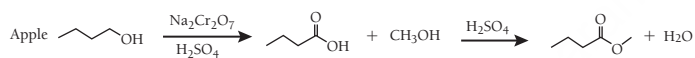
113.



115.



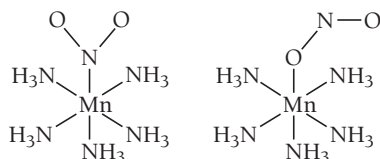
121. a. Apple: methyl butanoate; Pear: propyl ethanoate; Pineapple: ethyl butanoate



Chapter 22

17. a. $[\text{Ar}] 4s^2 3d^8$, $[\text{Ar}] 3d^8$
 b. $[\text{Ar}] 4s^2 3d^5$, $[\text{Ar}] 3d^3$
 c. $[\text{Kr}] 5s^2 4d^1$, $[\text{Kr}] 5s^1 4d^1$
 d. $[\text{Xe}] 6s^2 4f^{14} 5d^3$, $[\text{Xe}] 4f^{14} 5d^3$
19. a. +5 b. +7 c. +4
21. a. +3, 6 b. +2, 6
 c. +2, 4 d. +1, 2
23. a. hexaaquachromium(III)
 b. tetracyanocuprate(II)
 c. pentaaminebromoiron(III) sulfate
 d. amminetetraaquahydroxycobalt(III) chloride
25. a. $[\text{Cr}(\text{NH}_3)_6]^{3+}$
 b. $\text{K}_3[\text{Fe}(\text{CN})_6]$
 c. $[\text{Cu}(\text{en})(\text{SCN})_2]$
 d. $[\text{Pt}(\text{H}_2\text{O})_4][\text{PtCl}_6]$
27. a. $[\text{Co}(\text{NH}_3)_3(\text{CN})_3]$, triamminetricyanocobalt(III)
 b. $[\text{Cr}(\text{en})_3]^{3+}$, tris(ethylenediamine)chromium(III)

29.



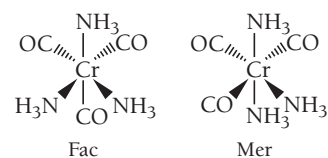
31. $[\text{Fe}(\text{H}_2\text{O})_5\text{Cl}]\text{Cl} \cdot \text{H}_2\text{O}$, pentaquachloroiron(II) chloride monohydrate
 $[\text{Fe}(\text{H}_2\text{O})_4\text{Cl}_2] \cdot 2 \text{H}_2\text{O}$, tetraaquadichloroiron(II) dihydrate

33. b, c, e

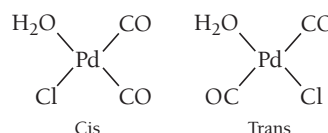
35. a. 3

b. No geometric isomers.

37. a.



b.



39. cis isomer is optically active.

41. a. $\begin{array}{ccc} \uparrow & \uparrow & \uparrow \\ \hline \end{array}$ 

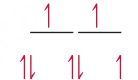
b.



c.



d.



43. 163 kJ/mol

45. $[\text{Co}(\text{CN})_6]^{3-} \longrightarrow 290 \text{ nm}$, colorless $[\text{Co}(\text{NH}_3)_6]^{3+} \longrightarrow 440 \text{ nm}$, yellow $[\text{CoF}_6]^{3-} \longrightarrow 770 \text{ nm}$, green

47. weak

49. a. 4

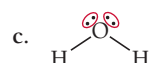
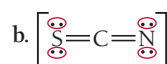
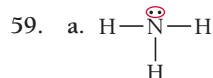
b. 3

c. 1

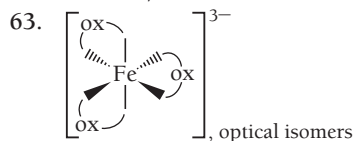
51. 3


53. porphyrin

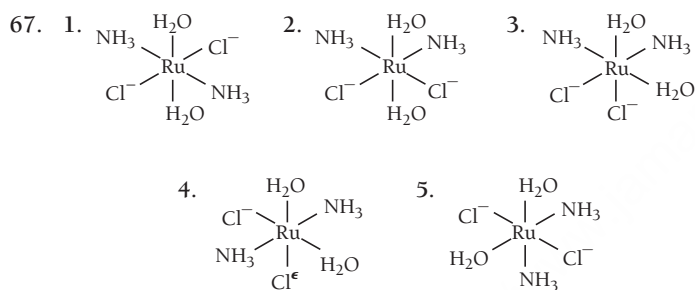
55. Water is a weak field ligand that forms a high-spin complex with hemoglobin. Because deoxyhemoglobin is a weak field, it absorbs large wavelength light and appears blue. Oxyhemoglobin is a low-spin complex and absorbs small wavelength light, so O_2 must be a strong field ligand.

57. a. $[\text{Ar}] 4s^1 3d^5$, $[\text{Ar}] 3d^5$, $[\text{Ar}] 3d^4$, $[\text{Ar}] 3d^3$ b. $[\text{Ar}] 4s^1 3d^{10}$, $[\text{Ar}] 3d^{10}$, $[\text{Ar}] 3d^9$ 

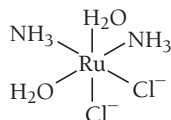
61. $[\text{MA}_2\text{B}_2\text{C}_2]$ all cis; A trans and B and C cis; B trans and A and C cis; C trans and A and B cis; all trans.
 $[\text{MA}_2\text{B}_3\text{C}]$ will have fac-mer isomers.
 $[\text{MAB}_2\text{C}_3]$ will have fac-mer isomers.
 $[\text{MAB}_3\text{C}_2]$ will have fac-mer isomers.
 $[\text{MA}_3\text{B}_2\text{C}]$ will have fac-mer isomers.
 $[\text{MA}_2\text{BC}_3]$ will have fac-mer isomers.
 $[\text{MA}_3\text{BC}_2]$ will have fac-mer isomers.
 $[\text{MABC}_2]$ will have AB cis-trans isomers.
 $[\text{MAB}_4\text{C}]$ will have AC cis-trans isomers.
 $[\text{MA}_4\text{BC}]$ will have BC cis-trans isomers.
 $[\text{MABC}_4]$ will have AB cis-trans isomers.



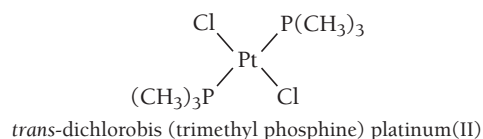
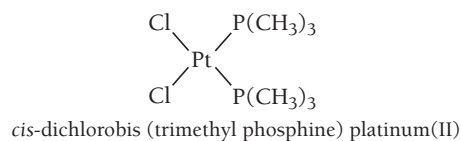
65. , paramagnetic



Only structure 3 is chiral. This is its mirror image.



69.



71. d_{z^2}
 $d_{x^2-y^2}$ and d_{xy}
 d_{xz} and d_{yz}
73. a. $2 \times 10^{-8} \text{ M}$
b. $6.6 \times 10^{-3} \text{ M}$
c. NiS will dissolve more easily in the ammonia solution because the formation of the complex ion is favorable, removing Ni^{2+} ions from the solution allowing more NiS to dissolve.
75. Prepare a solution that contains both $[\text{MCl}_6]^{3-}$ and $[\text{MBr}_6]^{3-}$ and see if any complex ions that contain both Cl and Br form. If they do, it would demonstrate that these complexes are labile.
77. pH = 10.1
79. Au
86. a. Red
c. smaller (because it absorbs at longer wavelengths)
e. The crystal field-splitting energies of the two complexes must be similar because they are both the same color.

APPENDIX IV

Answers to In-Chapter Practice Problems

Chapter E

- E.1. a. 29.8°C
b. 302.9 K
- E.2. The thermometer shown has markings every 1°F ; thus, the first digit of uncertainty is 0.1. The answer is 103.4°F .
- E.3. a. Each figure in this number is significant by rule 1: three significant figures.
b. This is a defined quantity that has an unlimited number of significant figures.
c. Both 1's are significant (rule 1), and the interior zero is significant as well (rule 2): three significant figures.
d. Only the two 9's are significant; the leading zeroes are not (rule 3): two significant figures.
e. There are five significant figures because the 1, 4, and 5 are nonzero (rule 1) and the trailing zeroes are after a decimal point, so they are significant as well (rule 4).
f. The number of significant figures is ambiguous because the trailing zeroes occur before an implied decimal point (rule 4). Assume two significant figures.
- E.4.2. a. 0.381
b. 121.0
c. 1.174
d. 8
- E.5. 21.4 g/cm^3 This matches the density of platinum.
- E.5. **For More Practice**
 4.50 g/cm^3 The metal is titanium.
- E.6. 3.15 yd
- E.7. 2.445 gal
- E.8. $1.61 \times 10^6\text{ cm}^3$
- E.8. **For More Practice**
 $3.23 \times 10^3\text{ kg}$
- E.9. 1.03 kg
- E.9. **For More Practice**
 $2.9 \times 10^{-2}\text{ cm}^3$
- E.10. 0.855 cm
- E.11. 2.70 g/cm^3

Chapter 1

- 1.1. For the first sample:

$$\frac{\text{mass of oxygen}}{\text{mass of carbon}} = \frac{17.2\text{ g O}}{12.9\text{ g C}} = 1.33 \text{ or } 1.33:1$$

For the second sample:

$$\frac{\text{mass of oxygen}}{\text{mass of carbon}} = \frac{10.5\text{ g O}}{7.88\text{ g C}} = 1.33 \text{ or } 1.33:1$$

The ratios of oxygen to carbon are the same in the two samples of carbon monoxide, so these results are consistent with the law of definite proportions.

$$1.2. \frac{\text{mass of hydrogen to 1 g of oxygen in water}}{\text{mass of hydrogen to 1 g of oxygen in hydrogen peroxide}} = \frac{0.125}{0.0625} = 2.00$$

The ratio of the mass of hydrogen from one compound to the mass of hydrogen in the other is equal to 2. This is a simple whole number and therefore consistent with the law of multiple proportions.

- 1.3. a. $Z = 6, A = 13, {}^1_6\text{C}$
b. 19 protons, 20 neutrons

1.4. 24.31 amu

1.4. For More Practice

70.92 amu

1.5. 4.65×10^{-2} mol Ag

1.6. 0.563 mol Cu

1.6. For More Practice

22.6 g Ti

1.7. 1.3×10^{22} C atoms

1.7. For More Practice

6.87 g W

1.8. $l = 1.72$ cm

1.8. For More Practice

2.90×10^{24} Cu atoms

Chapter 2

2.1. $5.83 \times 10^{14} \text{ s}^{-1}$

2.2. 2.64×10^{20} photons

2.2. For More Practice

435 nm

2.3. a. blue < green < red

b. red < green < blue

c. red < green < blue

2.4. 6.1×10^6 m/s

2.5. For the 5d orbitals:

$n = 5$

$l = 2$

$m_l = -2, -1, 0, 1, 2$

The five integer values for m_l signify that there are five 5d orbitals.

2.6. a. l cannot equal 3 if $n = 3$. $l = 2$

b. m_l cannot equal -2 if $l = -1$. Possible values for $m_l = -1, 0$, or 1

c. l cannot be 1 if $n = 1$. $l = 0$

2.7. 397 nm

2.7. For More Practice

$n = 1$

Chapter 3

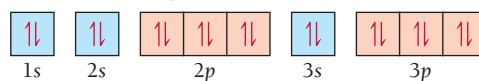
3.1. a. Cl $1s^2 2s^2 2p^6 3s^2 3p^5$ or [Ne] $3s^2 3p^5$

b. Si $1s^2 2s^2 2p^6 3s^2 3p^2$ or [Ne] $3s^2 3p^2$

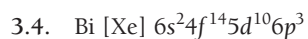
c. Sr $1s^2 2s^2 2p^6 3s^2 3p^6 4s^2 3d^{10} 4p^6 5s^2$ or [Kr] $5s^2$

d. O $1s^2 2s^2 2p^4$ or [He] $2s^2 2p^4$

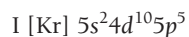
3.2. There are no unpaired electrons.



3.3. $1s^2 2s^2 2p^6 3s^2 3p^3$ or [Ne] $3s^2 3p^3$. The 5 electrons in the $3s^2 3p^3$ orbitals are the valence electrons, while the 10 electrons in the $1s^2 2s^2 2p^6$ orbitals belong to the core.



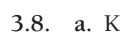
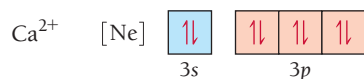
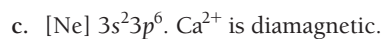
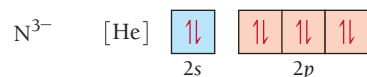
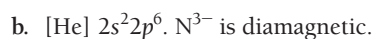
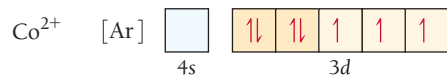
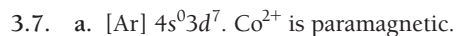
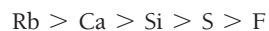
3.4. For More Practice



b. cannot predict



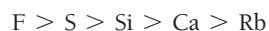
3.6. For More Practice



c. cannot predict



3.9. For More Practice



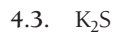
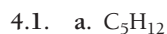
b. cannot predict based on simple trends (Po is larger)



3.10. For More Practice



Chapter 4



4.5. silver nitride

4.5. For More Practice



4.6. iron(II) sulfide

4.6. For More Practice



4.7. tin(II) chlorate

- 4.7. For More Practice
 $\text{Co}_3(\text{PO}_4)_2$
- 4.8. dinitrogen pentoxide
- 4.8. For More Practice
 PBr_3
- 4.9. 164.10 amu
- 4.10. 5.839×10^{20} $\text{C}_{13}\text{H}_{18}\text{O}_2$ molecules
- 4.10. For More Practice
 1.06 g H_2O
- 4.11. 53.29%
- 4.11. For More Practice
 74.19% Na
- 4.12. 83.9 g Fe_2O_3
- 4.12. For More Practice
 8.6 g Na
- 4.13. 4.0 g O
- 4.13. For More Practice
 3.60 g C
- 4.14. CH_2O
- 4.15. $\text{C}_{13}\text{H}_{18}\text{O}_2$
- 4.16. C_6H_6
- 4.16. For More Practice
 $\text{C}_2\text{H}_8\text{N}_2$
- 4.17. C_2H_5
- 4.18. $\text{C}_2\text{H}_4\text{O}$

Chapter 5

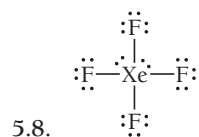
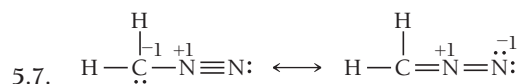
- 5.1. a. pure covalent
 b. ionic
 c. polar covalent
- 5.2. $\text{:C}\equiv\text{O:}$
- 5.3. $\begin{array}{c} \text{:O:} \\ \parallel \\ \text{H}-\text{C}-\text{H} \end{array}$
- 5.4. $\left[\text{:}\ddot{\text{Cl}}\text{:}\ddot{\text{O}}\text{:}\right]^-$
- 5.5. $\left[\text{:}\ddot{\text{O}}=\ddot{\text{N}}-\ddot{\text{O}}\text{:}\right]^- \longleftrightarrow \left[\text{:}\ddot{\text{O}}-\ddot{\text{N}}=\ddot{\text{O}}\text{:}\right]^-$

5.6.

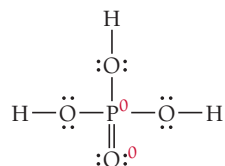
Structure	A			B			C		
	$\text{:}\ddot{\text{N}}=\text{N}=\ddot{\text{O}}\text{:}$			$\text{:N}\equiv\text{N}-\ddot{\text{O}}\text{:}$			$\text{:}\ddot{\text{N}}-\text{N}\equiv\text{O:}$		
Number of valence e^-	5	5	6	5	5	6	5	5	6
Number of nonbonding e^-	4	0	4	2	0	6	6	0	2
$\frac{1}{2}(\text{number of bonding } e^-)$	2	4	2	3	4	1	1	4	3
Formal charge	-1	+1	0	0	+1	-1	-2	+1	+1

Structure B contributes the most to the correct overall structure of N_2O .

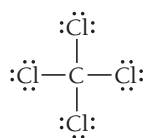
- 5.6. For More Practice
 The nitrogen is +1, the singly bonded oxygen atoms are -1, and the double-bonded oxygen atom has no formal charge.



5.8. For More Practice



5.9. tetrahedral



5.10. bent

5.11. linear

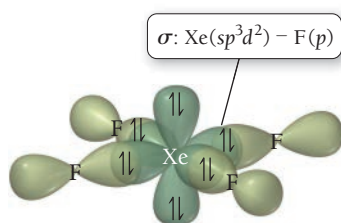
5.12.

Atom	Number of Electron Groups	Number of Lone Pairs	Molecular Geometry
Carbon (left)	4	0	Tetrahedral
Carbon (right)	3	0	Trigonal planar
Oxygen	4	2	Bent

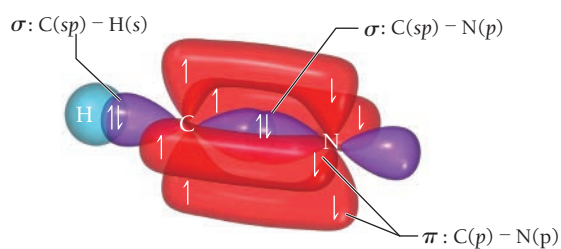
5.13. The molecule is nonpolar.

Chapter 6

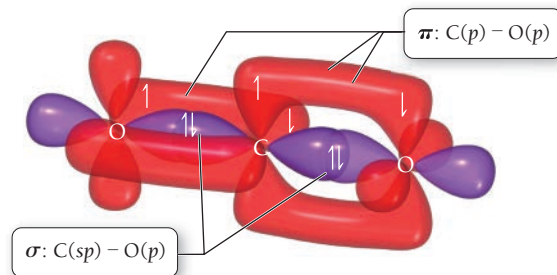
6.1. The xenon atom has six electron groups and therefore has an octahedral electron geometry. An octahedral electron geometry corresponds to sp^3d^2 hybridization (refer to Table 7.1).



6.2. Since there are only two electron groups around the central atom (C), the electron geometry is linear. According to Table 7.1, the corresponding hybridization on the carbon atom is sp .



- 6.3. Since there are only two electron groups about the central atom (C), the electron geometry is linear. The hybridization on C is sp (refer to Table 7.1).



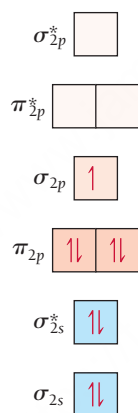
6.3. For More Practice

There are five electron groups about the central atom (I); therefore the electron geometry is trigonal bipyramidal, and the corresponding hybridization of I is sp^3d (refer to Table 7.1).

6.4. H_2^+ bond order = $+\frac{1}{2}$

Since the bond order is positive, the H_2^+ ion should be stable; however, the bond order of H_2^+ is lower than the bond order of H_2 (bond order = 1). Therefore, the bond in H_2^+ is weaker than in H_2 .

- 6.5. The bond order of H_2^+ is 2.5, which is lower than that of the N_2 molecule (bond order = 3); therefore the bond is weaker. The MO diagram shows that the N_2^+ ion has one unpaired electron and is therefore paramagnetic.



6.5. For More Practice

The bond order of Ne_2 is 0, which indicates that dineon does not exist.

- 6.6. The bond order of NO is +2.5. The MO diagram shows that the ion has one unpaired electron and is therefore paramagnetic.

Chapter 7

- 7.1. $\text{SiO}_2(s) + 3 \text{C}(s) \longrightarrow \text{SiC}(s) + 2 \text{CO}(g)$
- 7.2. $2 \text{C}_2\text{H}_6(g) + 7 \text{O}_2(g) \longrightarrow 4 \text{CO}_2(g) + 6 \text{H}_2\text{O}(g)$
- 7.3. $\text{Pb}(\text{NO}_3)_2(aq) + 2 \text{KCl}(aq) \longrightarrow \text{PbCl}_2(s) + 2 \text{KNO}_3(aq)$
- 7.4. 4.08 g HCl
- 7.5. 22 kg HNO_3
- 7.6. H_2 is the limiting reagent, since it produces the least amount of NH_3 . Therefore, 29.4 kg NH_3 is the theoretical yield.
- 7.7. CO is the limiting reagent, since it only produces 114 g Fe. Therefore, 114 g Fe is the theoretical yield: percentage yield = 63.4% yield.
- 7.8. 4 g Fe_2O_3
- 7.9. $2 \text{C}_2\text{H}_5\text{SH}(l) + 9 \text{O}_2(g) \longrightarrow 4 \text{CO}_2(g) + 2 \text{SO}_2(g) + 6 \text{H}_2\text{O}(g)$
- 7.10.
 - a. $2 \text{Al}(s) + 3 \text{Cl}_2(g) \longrightarrow 2 \text{AlCl}_3(s)$
 - b. $2 \text{Li}(s) + 2 \text{H}_2\text{O}(l) \longrightarrow 2 \text{Li}^+(aq) + 2 \text{OH}^-(aq) + \text{H}_2(g)$
 - c. $\text{H}_2(g) + \text{Br}_2(l) \longrightarrow 2 \text{HBr}(g)$

Chapter 8

- 8.1. 0.214 M NaNO₃
- 8.1. **For More Practice**
44.6 g KBr
- 8.2. 402 g C₁₂H₂₂O₁₁
- 8.2. **For More Practice**
221 mL of KCl solution
- 8.3. 667 mL
- 8.3. **For More Practice**
0.105 L
- 8.4. 51.4 mL HNO₃ solution
- 8.4. **For More Practice**
0.170 g CO₂
- 8.5. a. insoluble
b. insoluble
c. soluble
d. soluble
- 8.6. NH₄Cl(aq) + Fe(NO₃)₃(aq) → NO REACTION
- 8.7. 2 NaOH(aq) + CuBr₂(aq) → Cu(OH)₂(s) + 2 NaBr(aq)
- 8.8. 2 H⁺(aq) + 2 I⁻(aq) + Ba²⁺(aq) + 2 OH⁻(aq) → 2 H₂O(l) + Ba²⁺(aq) + 2 I⁻(aq)
H⁺(aq) + OH⁻(aq) → H₂O(l)
- 8.9. hydrofluoric acid
- 8.10. nitrous acid
- 8.10. **For More Practice**
HClO₄
- 8.11. Molecular equation
HBr(aq) + LiOH(aq) → H₂O(l) + LiBr(aq)
Net ionic equation
H⁺(aq) + OH⁻(aq) → H₂O(l)
- 8.12. HCHO₂(aq) + OH⁻(aq) → H₂O(l) + CHO₂⁻(aq)
- 8.13. 9.03 × 10⁻² M H₂SO₄
- 8.13. **For More Practice**
24.5 mL NaOH solution
- 8.14. 2 HBr(aq) + K₂SO₃(aq) → H₂O(l) + SO₂(g) + 2 KBr(aq)
- 8.14. **For More Practice**
2 H⁺(aq) + S²⁻(aq) → H₂S(g)
- 8.15. a. Cr = 0.
b. Cr³⁺ = +3.
c. Cl⁻ = -1, C = +4.
d. Br = -1, Sr = +2.
e. O = -2, S = +6.
f. O = -2, N = +5.
- 8.16. Sn is oxidized and N is reduced.
- 8.16. **For More Practice**
b. Reaction b is the only redox reaction. Al is oxidized and O is reduced.
- 8.17. a. This is a redox reaction in which Li is the reducing agent (it is oxidized) and Cl₂ is the oxidizing agent (it is reduced).
b. This is a redox reaction in which Al is the reducing agent and Sn²⁺ is the oxidizing agent.
c. This is not a redox reaction because no oxidation states change.
d. This is a redox reaction in which C is the reducing agent and O₂ is the oxidizing agent.
- 8.18. a. yes
b. no

Chapter 9

9.1. $\Delta E = 71 \text{ J}$

9.2. $C_s = 0.38 \frac{\text{J}}{\text{g} \cdot ^\circ\text{C}}$

The specific heat capacity of gold is $0.128 \text{ J/g} \cdot ^\circ\text{C}$; therefore the rock cannot be pure gold.

9.2. For More Practice

$T_f = 42.1 ^\circ\text{C}$

9.3. 37.8 g Cu

9.4. -122 J

9.4. For More Practice

$\Delta E = -998 \text{ J}$

9.5. $\Delta E_{\text{reaction}} = -3.91 \times 10^3 \text{ kJ/mol C}_6\text{H}_{14}$

9.5. For More Practice

$C_{\text{cal}} = 4.55 \frac{\text{kJ}}{^\circ\text{C}}$

9.6. a. endothermic, positive ΔH b. endothermic, positive ΔH c. exothermic, negative ΔH

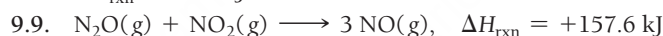
9.7. $-2.06 \times 10^3 \text{ kJ}$

9.7. For More Practice

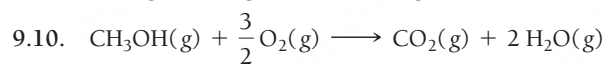
$33 \text{ g C}_4\text{H}_{10}$

99 g CO_2

9.8. $\Delta H_{\text{rxn}} = -68 \text{ kJ}$



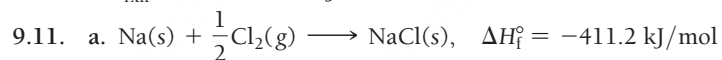
9.9. For More Practice



$\Delta H_{\text{rxn}} = -641 \text{ kJ}$

9.10. For More Practice

$\Delta H_{\text{rxn}} = -8.0 \times 10^1 \text{ kJ}$



9.12. $\Delta H_{\text{rxn}}^\circ = -851.5 \text{ kJ}$

9.13. $\Delta H_{\text{rxn}}^\circ = -1648.4 \text{ kJ}$

111 kJ emitted (-111 kJ)

9.14. $\text{KI} < \text{LiBr} < \text{CaO}$

9.14. For More Practice



Chapter 10

10.1. 15.0 psi

10.1. For More Practice

80.6 kPa

10.2. 2.1 atm at a depth of approximately 11 m.

10.3. 123 mL

10.4. 11.3 L

10.5. $1.63 \text{ atm}, 23.9 \text{ psi}$

10.6. 16.1 L

10.6. For More Practice

976 mmHg

10.7. $d = 4.91 \text{ g/L}$

- 10.7. For More Practice
44.0 g/mol
- 10.8. 70.7 g/mol
- 10.9. 0.0610 mol H₂
- 10.10. 4.2 atm
- 10.11. 12.0 mg H₂
- 10.12. $u_{\text{rms}} = 238 \text{ m/s}$
- 10.13. $\frac{\text{rate}_{\text{H}_2}}{\text{rate}_{\text{Kr}}} = 6.44$
- 10.14. 82.3 g Ag₂O
- 10.14. For More Practice
7.10 g Ag₂O
- 10.15. 6.53 L O₂

Chapter 11

- 11.1. b, c
- 11.2. HF has a higher boiling point than HCl because, unlike HCl, HF is able to form hydrogen bonds. The hydrogen bond is the strongest of the intermolecular forces and requires more energy to break.
- 11.3. $5.83 \times 10^3 \text{ kJ}$
- 11.3. For More Practice
49°C
- 11.4. 33.8 kJ/mol
- 11.5. $7.04 \times 10^3 \text{ torr}$
- 11.6. No phase transition occurs.

Chapter 12

- 12.1. 29.4°
- 12.2. 78.5%
- 12.3. $3.24 \times 10^{-23} \text{ cm}^3$
- 12.4. $7.18 \frac{\text{g}}{\text{cm}^3}$
- 12.5. metallic

Chapter 13

- 13.1. a. not soluble
b. soluble
c. not soluble
d. not soluble
- 13.2. $2.7 \times 10^{-4} \text{ M}$
- 13.3. 42.5 g C₁₂H₂₂O₁₁
- 13.3. For More Practice
 $3.3 \times 10^4 \text{ L}$
- 13.4. a. $M = 0.415 \text{ M}$
b. $m = 0.443 \text{ m}$
c. % by mass = 13.2%
d. $\chi_{\text{C}_{12}\text{H}_{22}\text{O}_{11}} = 0.00793$
e. mole percent = 0.793%
- 13.5. 0.600 M
- 13.5. For More Practice
0.651 *m*
- 13.6. 22.5 torr

13.6. For More Practice

0.144

13.7. a. $P_{\text{benzene}} = 26.6 \text{ torr}$

$P_{\text{toluene}} = 20.4 \text{ torr}$

b. 47.0 torr

c. 52.5% benzene; 47.5% toluene

The vapor will be richer in the more volatile component, which in this case is benzene.

13.8. $T_f = -4.8^\circ\text{C}$

13.9. 101.84°C

13.10. 11.8 atm

13.11. -0.60°C

13.12. 0.014 mol NaCl

Chapter 14

14.1. $\frac{\Delta[\text{H}_2\text{O}_2]}{\Delta t} = -4.40 \times 10^{-3} \text{ M/s}$

$\frac{\Delta[\text{I}_3^-]}{\Delta t} = 4.40 \times 10^{-3} \text{ M/s}$

14.2. a. $\text{Rate} = k[\text{CHCl}_3][\text{Cl}_2]^{1/2}$. (Fractional-order reactions are not common but are occasionally observed.)

b. $3.5 \text{ M}^{-1/2} \cdot \text{s}^{-1}$

14.3. $5.78 \times 10^{-2} \text{ M}$

14.4. 0.0277 M

14.5. $1.64 \times 10^{-3} \text{ M}$

14.6. 79.2 s

14.7. $2.07 \times 10^{-5} \frac{\text{L}}{\text{mol} \cdot \text{s}}$

14.8. $6.13 \times 10^{-4} \frac{\text{L}}{\text{mol} \cdot \text{s}}$



$\text{Rate} = k[\text{A}]^2$

Chapter 15

15.1. $K = \frac{[\text{CO}_2]^3[\text{H}_2\text{O}]^4}{[\text{C}_3\text{H}_8][\text{O}_2]^5}$

15.2. 2.1×10^{-13}

15.2. For More Practice

1.4×10^2

15.3. 6.2×10^2

15.4. $K_c = \frac{[\text{Cl}_2]^2}{[\text{HCl}]^4[\text{O}_2]}$

15.5. 9.4

15.6. 1.1×10^{-6}

15.7. $Q_c = 0.0196$

Reaction proceeds to the left.

15.8. 0.033 M

15.9. $[\text{N}_2] = 4.45 \times 10^{-3} \text{ M}$

$[\text{O}_2] = 4.45 \times 10^{-3} \text{ M}$

$[\text{NO}] = 1.1 \times 10^{-3} \text{ M}$

15.10. $[\text{N}_2\text{O}_4] = 0.005 \text{ M}$

$[\text{NO}_2] = 0.041 \text{ M}$

- 15.11. $P_{I_2} = 0.0027 \text{ atm}$
 $P_{Cl_2} = 0.0027 \text{ atm}$
 $P_{ICl_2} = 0.246 \text{ atm}$
- 15.12. $1.67 \times 10^{-7} \text{ M}$
- 15.13. $6.78 \times 10^{-6} \text{ M}$
- 15.14. Adding Br_2 increases the concentration of Br_2 , causing a shift to the left (away from the Br_2).
Adding $BrNO$ increases the concentration of $BrNO$, causing a shift to the right.
- 15.15. Decreasing the volume causes the reaction to shift right. Increasing the volume causes the reaction to shift left.
- 15.16. If we increase the temperature, the reaction shifts to the left. If we decrease the temperature, the reaction shifts to the right.

Chapter 16

- 16.1. a. H_2O donates a proton to C_5H_5N , making it the acid. The conjugate base is therefore OH^- .
Since C_5H_5N accepts the proton, it is the base and becomes the conjugate acid $C_5H_5NH^+$.
- b. Since HNO_3 donates a proton to H_2O it is the acid, making NO_3^- the conjugate base. Since H_2O is the proton acceptor, it is the base and becomes the conjugate acid, H_3O^+ .
- 16.2. a. $[H_3O^+] = 6.7 \times 10^{-13} \text{ M}$
Since $[H_3O^+] < [OH^-]$ the solution is basic.
- b. $[H_3O^+] = 1.0 \times 10^{-7} \text{ M}$
Neutral solution.
- c. $[H_3O^+] = 1.2 \times 10^{-5} \text{ M}$
Since $[H_3O^+] > [OH^-]$ the solution is acidic.
- 16.3. a. 8.02 (basic)
b. 11.85 (basic)
- 16.4. $4.3 \times 10^{-9} \text{ M}$
- 16.5. $9.4 \times 10^{-3} \text{ M}$
- 16.6. 3.28
- 16.7. 2.72
- 16.8. 1.8×10^{-6}
- 16.9. 0.85%
- 16.10. $2.1 \times 10^{-7} \text{ M}$
- 16.11. $[OH^-] = 0.020 \text{ M}$
 $pH = 12.30$
- 16.12. $[OH^-] = 1.2 \times 10^{-2} \text{ M}$
 $pH = 12.08$
- 16.13. a. weak base
b. pH-neutral
- 16.14. 9.07
- 16.15. a. pH-neutral
b. weak acid
c. weak acid
- 16.16. a. basic
b. acidic
c. pH-neutral
d. acidic
- 16.17. 3.83
- 16.18. $[SO_4^{2-}] = 0.00386 \text{ M}$
 $pH = 1.945$
- 16.19. $5.6 \times 10^{-11} \text{ M}$

Chapter 17

- 17.1. 4.44
- 17.1. For More Practice
3.44
- 17.2. 9.14
- 17.3. 4.87
- 17.3. For More Practice
4.65
- 17.4. 9.68
- 17.4. For More Practice
9.56
- 17.5. hypochlorous acid (HClO); 2.4 g NaClO
- 17.6. 1.74
- 17.7. 8.08
- 17.8. 2.30×10^{-6} M
- 17.9. 5.3×10^{-13}
- 17.10. 1.21×10^{-5} M
- 17.11. FeCO_3 will be more soluble in an acidic solution than PbBr_2 because the CO_3^{2-} ion is a basic anion, whereas Br^- is the conjugate base of a strong acid (HBr) and is therefore pH-neutral.
- 17.12. $Q > K_{\text{sp}}$; therefore, a precipitate forms.
- 17.13. 2.9×10^{-6} M
- 17.14. a. AgCl precipitates first; $[\text{NaCl}] = 7.1 \times 10^{-9}$ M
b. $[\text{Ag}^+]$ is 1.5×10^{-8} M when PbCl_2 begins to precipitate, and $[\text{Pb}^{2+}]$ is 0.085 M.
- 17.15. 9.6×10^{-6} M

Chapter 18

- 18.1. a. positive
b. negative
c. positive
- 18.2. 15.2 J/K
- 18.3. a. -548 J/K
b. ΔS_{sys} is negative.
c. ΔS_{univ} is negative, and the reaction is not spontaneous.
- 18.3. For More Practice
375 K
- 18.4. $\Delta G = -101.6 \times 10^3$ J
Therefore, the reaction is spontaneous. Since both ΔH and ΔS are negative, as the temperature increases ΔG will become more positive.
- 18.5. -153.2 J/K
- 18.6. $\Delta G_{\text{rxn}}^\circ = -36.3$ kJ
Since $\Delta G_{\text{rxn}}^\circ$ is negative, the reaction is spontaneous at this temperature.
- 18.7. $\Delta G_{\text{rxn}}^\circ = -42.1$ kJ
Since the value of $\Delta G_{\text{rxn}}^\circ$ at the lowered temperature is more negative (or less positive) (which is -36.3 kJ), the reaction is more spontaneous.
- 18.8. $\Delta G_{\text{rxn}}^\circ = -689.6$ kJ
Since $\Delta G_{\text{rxn}}^\circ$ is negative, the reaction is spontaneous at this temperature.
- 18.8. For More Practice
 $\Delta G_{\text{rxn}}^\circ = -689.7$ kJ (at 25°)
The value calculated for $\Delta G_{\text{rxn}}^\circ$ from the tabulated values (-689.6 kJ) is the same, to within 1 in the least significant digit, as the value calculated using the equation for $\Delta G_{\text{rxn}}^\circ$.
 $\Delta G_{\text{rxn}}^\circ = -649.7$ kJ (at 500.0 K)
You could not calculate $\Delta G_{\text{rxn}}^\circ$ at 500.0 K using tabulated ΔG_f° values because the tabulated values of free energy are calculated at a standard temperature of 298 K, much lower than 500 K.

- 18.9. +107.1 kJ
 18.10. $\Delta G_{\text{rxn}} = -129 \text{ kJ}$
 The reaction is more spontaneous under these conditions than under standard conditions because ΔG_{rxn} is more negative than $\Delta G_{\text{rxn}}^{\circ}$.
 18.11. -10.9 kJ

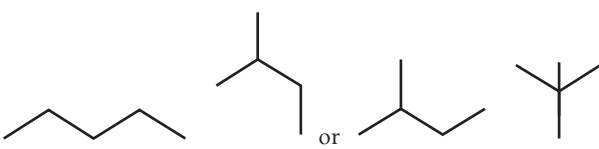
Chapter 19

- 19.1. $2 \text{ Cr}(s) + 4 \text{ H}^{+}(aq) \longrightarrow 2 \text{ Cr}^{2+}(aq) + 2 \text{ H}_2(g)$
 19.2. $\text{Cu}(s) + 4 \text{ H}^{+}(aq) + 2 \text{ NO}_3^{-}(aq) \longrightarrow \text{Cu}^{2+}(aq) + 2 \text{ NO}_2(g) + 2 \text{ H}_2\text{O}(l)$
 19.3. $3 \text{ ClO}^{-}(aq) + 2 \text{ Cr}(\text{OH})_4^{-}(aq) + 2 \text{ OH}^{-}(aq) \longrightarrow 3 \text{ Cl}^{-}(aq) + 2 \text{ CrO}_4^{2-}(aq) + 5 \text{ H}_2\text{O}(l)$
 19.4. +0.60 V
 19.5. a. The reaction *will* be spontaneous as written.
 b. The reaction *will not* be spontaneous as written.
 19.6. $\Delta G^{\circ} = -3.63 \times 10^5 \text{ J}$
 Since ΔG° is negative, the reaction is spontaneous.
 19.7. 4.5×10^3
 19.8. 1.08 V
 19.9. Anode: $2 \text{ H}_2\text{O}(l) \longrightarrow \text{O}_2(g) + 4 \text{ H}^{+}(aq) + 4 e^{-}$
 Cathode: $2 \text{ H}_2\text{O}(l) + 2 e^{-} \longrightarrow \text{H}_2(g) + 2 \text{ OH}^{-}(aq)$
 19.10. $6.0 \times 10^1 \text{ min}$

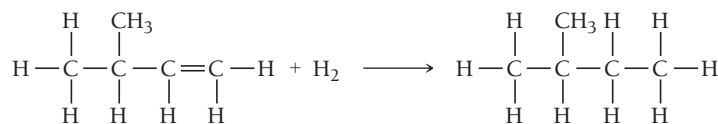
Chapter 20

- 20.1. ${}^{216}_{84}\text{Po} \longrightarrow {}^{212}_{82}\text{Pb} + {}^4_2\text{He}$
 20.2. a. ${}^{235}_{92}\text{U} \longrightarrow {}^{231}_{90}\text{Th} + {}^4_2\text{He}$
 ${}^{231}_{90}\text{Th} \longrightarrow {}^{231}_{91}\text{Pa} + {}^0_{-1}\text{e}$
 ${}^{231}_{91}\text{Pa} \longrightarrow {}^{227}_{89}\text{Ac} + {}^4_2\text{He}$
 b. ${}^{22}_{11}\text{Na} \longrightarrow {}^{22}_{10}\text{Ne} + {}^0_{+1}\text{e}$
 c. ${}^{76}_{36}\text{Kr} + {}^0_{-1}\text{e} \longrightarrow {}^{76}_{35}\text{Br}$
 20.2. For More Practice
 Positron emission (${}^{40}_{19}\text{K} \longrightarrow {}^{40}_{18}\text{Ar} + {}^0_{+1}\text{e}$) or electron capture (${}^{40}_{19}\text{K} + {}^0_{-1}\text{e} \longrightarrow {}^{40}_{18}\text{Ar}$)
 20.3. a. positron emission
 b. beta decay
 c. positron emission
 20.4. 10.7 yr
 20.5. $t = 964 \text{ yr}$
 No, the C-14 content suggests that the scroll is from about A.D. 1000, not 500 B.C.
 20.6. $1.0 \times 10^9 \text{ yr}$
 20.7. Mass defect = 1.934 amu
 Nuclear binding energy = 7.569 MeV/nucleon

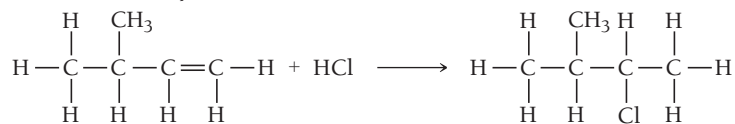
Chapter 21

- 21.1. 
 21.2. 3-methylhexane
 21.3. 3,5-dimethylheptane
 21.4. 2,3,5-trimethylhexane
 21.5. a. 4,4-dimethyl-2-pentyne
 b. 3-ethyl-4,6-dimethyl-1-heptene

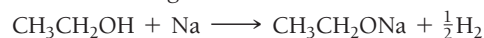
21.6. a. 2-methylbutane



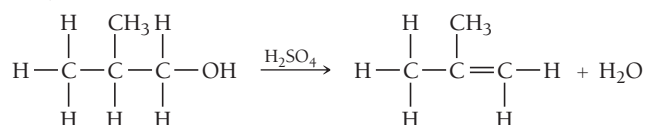
b. 2-chloro-3-methylbutane



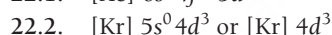
21.7. a. Alcohol reacting with an active metal.



b. dehydration reaction

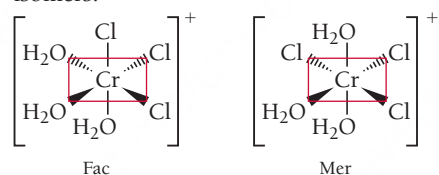


Chapter 22

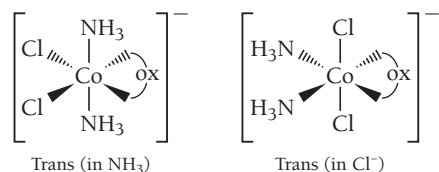
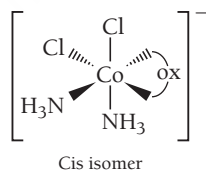


22.3. pentaamminecarbonylmanganese(II) sulfate

22.4. sodium tetrachloroplatinate(II)

22.5. The complex ion $[\text{Cr}(\text{H}_2\text{O})_3\text{Cl}_3]^+$ fits the general formula MA_3B_3 , which results in fac and mer isomers.

22.6. The oxalate ligand is a small bidentate ligand, so it will have to occupy two adjacent (cis) positions of the octahedron. There are three ways to arrange the two NH_3 and two Cl^- ligands in the four remaining positions. One has both NH_3 and both Cl^- in cis positions (cis isomer). Another has the NH_3 ligands in a trans arrangement with both Cl^- in cis positions (*trans*-ammine isomer). The third has both NH_3 ligands cis and the Cl^- ligands trans (*trans*-chloro isomer).

22.7. Both the fac and mer isomers are superimposable (by rotating 180°) on their mirror images, so neither one is optically active.

22.8. 288 kJ/mol

22.9. 5 unpaired electrons

22.10. 1 unpaired electron

GLOSSARY

absorption spectrum A plot of the absorption of light of a sample of matter as a function of wavelength. (2.3)

accuracy A term that refers to how close a measured value is to the actual value. (E.3)

acid See *Arrhenius definitions (of acids and bases)*, *Brønsted–Lowry definitions (of acids and bases)*, and *Lewis acid*. (8.4)

acid ionization constant (K_a) The equilibrium constant for the ionization reaction of a weak acid; used to compare the relative strengths of weak acids. (16.5)

acid–base reaction (neutralization reaction) A reaction in which an acid reacts with a base and the two neutralize each other, producing water. (8.7)

acid–base titration A laboratory procedure in which a basic (or acidic) solution of unknown concentration is reacted with an acidic (or basic) solution of known concentration, in order to determine the concentration of the unknown. (17.4)

acidic solution A solution containing an acid that creates additional H_3O^+ ions, causing $[\text{H}_3\text{O}^+]$ to increase. (16.6)

activated complex (transition state) A high-energy intermediate state between reactant and product. (14.6)

activation energy An energy barrier in a chemical reaction that must be overcome for the reactants to be converted into products. (14.6)

active site The specific area of an enzyme at which catalysis occurs. (14.8)

activity series of metals A listing of metals in order of decreasing activity, decreasing ability to oxidize, and decreasing tendency to lose electrons. (8.9)

actual yield The amount of product actually produced by a chemical reaction. (7.5)

addition polymer A polymer in which the monomers simply link together without the elimination of any atoms. (21.14)

addition reaction A type of organic reaction in which two substituents are added across a double bond. (21.6)

alcohol A member of the family of organic compounds that contain a hydroxyl functional group ($-\text{OH}$). (21.9)

aldehyde A member of the family of organic compounds that contain a carbonyl functional group ($\text{C}=\text{O}$) bonded to two R groups, one of which is a hydrogen atom. (21.10)

aliphatic hydrocarbon An organic compound consisting of hydrogen and carbon atoms and containing no benzene rings; alkanes, alkenes, and alkynes are aliphatic hydrocarbons. (21.3)

alkali metals Highly reactive metals in group 1A of the periodic table. (3.5)

alkaline battery A dry-cell battery that employs half-reactions that differ slightly in a basic medium. (19.7)

alkaline earth metals Fairly reactive metals in group 2A of the periodic table. (3.5)

alkaloid Organic bases found in plants that are often poisonous. (16.2)

alkane A hydrocarbon containing only single bonds. (21.3)

alkene A hydrocarbon containing one or more carbon–carbon double bonds. (21.3)

alkyne A hydrocarbon containing one or more carbon–carbon triple bonds. (21.3)

allotrope One of two or more forms of the same element; each form has a different structure. (12.6)

alpha (α) decay The form of radioactive decay that occurs when an unstable nucleus emits a particle composed of two protons and two neutrons. (20.3)

alpha (α) particle A low-energy particle released during alpha decay; equivalent to a He-4 nucleus. (20.3)

amine A member of a family of organic compounds containing nitrogen that are derived from ammonia with one or more of the hydrogen atoms replaced by alkyl groups. (21.13)

amorphous Describes a solid in which atoms or molecules do not have any long-range order. (11.2)

ampere (A) The SI unit for electrical current; $1 \text{ A} = 1 \text{ C/s}$. (19.3)

amphoteric Able to act as either an acid or a base. (16.3)

amplitude The vertical height of a crest (or depth of a trough) of a wave; a measure of wave intensity. (2.2)

angular momentum quantum number (l) An integer that determines the shape of an orbital. (2.5)

anion A negatively charged ion. (1.8)

anode The electrode in an electrochemical cell where oxidation occurs; electrons flow away from the anode. (19.3)

antibonding orbital A molecular orbital that is higher in energy than any of the atomic orbitals from which it was formed. (6.4)

aqueous solution A solution in which water acts as the solvent. (8.2, 13.2)

aromatic hydrocarbon A hydrocarbon containing an aromatic (or benzene) ring. (21.3)

Arrhenius definitions (of acids and bases) The definitions of an acid as a substance that produces H^+ ions in aqueous solution and a base as a substance that produces OH^- ions in aqueous solution. (8.7, 16.3)

Arrhenius equation The equation that relates the rate constant of a reaction to the temperature, the activation energy, and the frequency factor;

$$k = Ae^{\frac{-E_a}{RT}}. \quad (14.6)$$

Arrhenius plot The plot of the natural log of the rate constant ($\ln k$) versus the inverse of the temperature in kelvins ($1/T$) that yields a straight line with a slope of $-E_a/R$ and a y-intercept of $\ln A$. (14.6)

atmosphere (atm) A unit of pressure based on the average pressure of air at sea level; $1 \text{ atm} = 101,325 \text{ Pa}$. (10.3)

atom A submicroscopic particle that constitutes the fundamental building block of ordinary matter; the smallest identifiable unit of an element. (1.1)

atomic mass (atomic weight) The average mass in amu of the atoms of a particular element based on the relative abundance of the various isotopes; numerically equivalent to the mass in grams of one mole of the element. (1.9)

atomic mass unit (amu) A unit used to express the masses of atoms and subatomic particles; defined as 1/12 the mass of a carbon atom containing 6 protons and 6 neutrons. (1.8)

atomic number (Z) The number of protons in an atom; the atomic number defines the element. (1.8)

atomic orbital (AO) A mathematical function that represents a state of an electron in an atom. (6.2)

atomic radius A set of average bonding radii determined from measurements on a large number of elements and compounds. (3.6)

atomic solids Solids whose composite units are atoms; nonbonding atomic solids, metallic atomic solids, and network covalent solids are atomic solids. (12.4)

atomic theory The theory that each element is composed of tiny indestructible particles called atoms, that all atoms of a given element have the same mass and other properties, and that atoms combine in simple, whole-number ratios to form compounds. (1.5)

aufbau principle The principle that indicates the pattern of orbital filling in an atom. (3.3)

autoionization The process by which water acts as an acid and a base with itself. (16.6)

Avogadro's law The law that states that the volume of a gas is directly proportional to its amount in moles ($V \propto n$). (10.4)

Avogadro's number The number of ^{12}C atoms in exactly 12 g of ^{12}C ; equal to 6.0221421×10^{23} . (1.10)

ball-and-stick molecular model A representation of the arrangement of atoms in a molecule that shows how the atoms are bonded to each other and the overall shape of the molecule. (4.3)

band gap An energy gap that exists between the valence band and conduction band of semiconductors and insulators. (12.8)

band theory A model for bonding in atomic solids that comes from molecular orbital theory in which atomic orbitals combine and become delocalized over the entire crystal. (12.8)

barometer An instrument used to measure atmospheric pressure. (10.3)

base See *Arrhenius definitions (of acids and bases)*, *Brønsted–Lowry definitions (of acids and bases)*, and *Lewis base*. (8.7)

base ionization constant (K_b) The equilibrium constant for the ionization reaction of a weak base; used to compare the relative strengths of weak bases. (16.8)

basic solution A solution containing a base that creates additional OH^- ions, causing the $[\text{OH}^-]$ to increase. (16.6)

bent geometry A molecular geometry in which three atoms bond in a nonlinear arrangement. (5.8)

beta (β) decay The form of radioactive decay that occurs when an unstable nucleus emits an electron. (20.3)

beta (β) particle A medium-energy particle released during beta decay; equivalent to an electron. (20.3)

bidentate Describes ligands that donate two electron pairs to the central metal. (22.3)

bimolecular An elementary step in a reaction that involves two particles, either the same species or different, that collide and go on to form products. (14.7)

binary acid An acid composed of hydrogen and a nonmetal. (8.7)

binary compound A compound that contains only two different elements. (4.6)

binding energy Energy with which an electron is bound to the metal. (2.2)

biological effectiveness factor (RBE) A correction factor multiplied by the dose of radiation exposure in rad to obtain the dose in rem. (20.11)

body-centered cubic A unit cell that consists of a cube with one atom at each corner and one atom at the center of the cube. (12.3)

boiling point The temperature at which the vapor pressure of a liquid equals the external pressure. (11.5)

boiling point elevation The effect of a solute that causes a solution to have a higher boiling point than the pure solvent. (13.6)

bomb calorimeter A piece of equipment designed to measure ΔE_{rxn} for combustion reactions at constant volume. (9.5)

bond energy For a chemical bond, the energy required to break 1 mol of the bond in the gas phase. (5.6)

bond length The average length of a bond between two particular atoms in a variety of compounds. (5.6)

bond order For a molecule, the number of electrons in bonding orbitals minus the number of electrons in nonbonding orbitals divided by two; a positive bond order implies that the molecule is stable. (6.4)

bonding orbital A molecular orbital that is lower in energy than any of the atomic orbitals from which it was formed. (6.4)

bonding pair A pair of electrons shared between two atoms. (4.7)

Born–Haber cycle A hypothetical series of steps based on Hess's law that represents the formation of an ionic compound from its constituent elements. (9.11)

borosilicate glass (Pyrex®) A type of glass containing boric oxide (B_2O_3). Borosilicate glass expands less when heated and can withstand heating and cooling cycles without shattering. (12.7)

Boyle's law The law that states that volume of a gas is inversely proportional to its pressure $\left(V \propto \frac{1}{P}\right)$. (10.4)

Brønsted–Lowry definitions (of acids and bases) The definitions of an acid as a proton (H^+ ion) donor and a base as a proton acceptor. (16.3)

buffer A solution containing significant amounts of both a weak acid and its conjugate base (or a weak base and its conjugate acid) that resists pH change by neutralizing added acid or added base. (17.2)

buffer capacity The amount of acid or base that can be added to a buffer without destroying its effectiveness. (17.3)

calorie (cal) A unit of energy defined as the amount of energy required to raise one gram of water 1 °C; equal to 4.184 J. (E.6, 9.2)

Calorie (Cal) A unit of energy that is equivalent to 1000 lowercase “c” calories. (E.6)

calorimetry The experimental procedure used to measure the heat evolved in a chemical reaction. (9.5)

capillary action The ability of a liquid to flow against gravity up a narrow tube due to adhesive and cohesive forces. (11.4)

carbonyl group A functional group consisting of a carbon atom double-bonded to an oxygen atom ($\text{C}=\text{O}$). (21.10)

carboxylic acid An organic acid containing the functional group $-\text{COOH}$. (16.2, 21.11)

catalyst A substance that is not consumed in a chemical reaction but increases the rate of the reaction by providing an alternate mechanism in which the rate-determining step has a smaller activation energy. (14.8)

cathode The electrode in an electrochemical cell where reduction occurs; electrons flow toward the cathode. (19.3)

cathode ray A stream of electrons produced when a high electrical voltage is applied between two electrodes within a partially evacuated tube. (1.6)

cathode ray tube A partially evacuated tube equipped with electrodes to produce cathode rays. (1.6)

cation A positively charged ion. (1.8)

cell potential (cell emf) (E_{cell}) The potential difference between the cathode and the anode in an electrochemical cell. (19.3)

Celsius ($^{\circ}\text{C}$) scale The temperature scale most often used by scientists (and by most countries other than the United States), on which pure water freezes at 0°C and boils at 100°C (at atmospheric pressure). (E.2)

ceramics Inorganic metallic solids that are prepared from powders usually mixed with water, formed in the desired shape, and then heated. (12.7)

chain reaction A series of reactions in which previous reactions cause future ones; in a fission bomb, neutrons produced by the fission of one uranium nucleus induce fission in other uranium nuclei. (20.7)

Charles's law The law that states that the volume of a gas is directly proportional to its temperature ($V \propto T$). (10.4)

chelate A complex ion that contains either a bi- or polydentate ligand. (22.3)

chelating agent The coordinating ligand of a chelate. (22.3)

chemical bond The sharing or transfer of electrons to attain stable electron configurations for the bonding atoms. (4.2)

chemical change A change that alters the molecular composition of a substance; see also *chemical reaction*. (7.2)

chemical energy The energy associated with the relative positions of electrons and nuclei in atoms and molecules. (9.2)

chemical equation A symbolic representation of a chemical reaction; a balanced equation contains equal numbers of the atoms of each element on both sides of the equation. (7.3)

chemical formula A symbolic representation of a compound that indicates the elements present in the compound and the relative number of atoms of each. (4.3)

chemical property A property that a substance displays only by changing its composition via a chemical change. (7.2)

chemical reaction A process by which one or more substances are converted to one or more different substances; see also *chemical change*. (1.5, 7.3)

chemical symbol A one- or two-letter abbreviation for an element that is listed directly below its atomic number on the periodic table. (1.8)

chemistry The science that seeks to understand the properties of matter by studying the structure of the particles that compose matter. (1.1)

chiral Describes a molecule that is not superimposable on its mirror image. (21.3)

Clausius–Clapeyron equation The equation that displays the exponential relationship between vapor pressure and temperature;

$$\ln(P_{\text{vap}}) = \frac{-\Delta H_{\text{vap}}}{R} \left(\frac{1}{T} \right) + \ln \beta. \quad (11.5)$$

clay A powdered form of a mineral (such as an aluminosilicate) mixed with water. (12.7)

coffee-cup calorimeter A piece of equipment designed to measure ΔH_{rxn} for reactions at constant pressure. (9.7)

colligative property A property that depends on the amount of a solute but not on the type. (13.6)

collision frequency In the gas phase, the number of collisions that occur per unit time between gaseous particles. (14.6)

collision model A model of chemical reactions in which a reaction occurs after a sufficiently energetic collision between two reactant molecules. (14.6)

combustion analysis A method of obtaining empirical formulas for unknown compounds, especially those containing carbon and hydrogen, by burning a sample of the compound in pure oxygen and analyzing the products of the combustion reaction. (4.11)

combustion reaction A type of chemical reaction in which a substance combines with oxygen to form one or more oxygen-containing compounds; the reaction often causes the evolution of heat and light in the form of a flame. (7.6)

common ion effect The tendency for a common ion to decrease the solubility of an ionic compound or to decrease the ionization of a weak acid or weak base. (17.2)

common name A traditional name of a compound that gives little or no information about its chemical structure; for example, the common name of NaHCO_3 is “baking soda.” (4.6)

complementary properties Properties that exclude one another; that is, the more you know about one, the less you know about the other. For example, the wave nature and particle nature of the electron are complementary. (2.4)

complete ionic equation An equation that lists individually all of the ions present as either reactants or products in a chemical reaction. (8.6)

complex ion An ion that contains a central metal ion bound to one or more ligands. (17.7, 22.3)

composition Refers to the type of particles that compose matter; by composition is one way to classify matter. (1.2)

compound A substance composed of two or more elements in fixed, definite proportions. (1.2)

concentrated solution A solution that contains a large amount of solute relative to the amount of solvent. (8.2, 13.5)

concrete A mixture of Portland cement, sand, and pebbles. (12.7)

condensation The phase transition from gas to liquid. (11.5)

condensation polymer A polymer formed by elimination of an atom or small group of atoms (usually water) between pairs of monomers during polymerization. (12.9)

condensation reaction A reaction in which two or more organic compounds are joined, often with the loss of water or some other small molecule. (21.11)

conduction band In band theory, the band of energy levels that forms from antibonding molecular orbitals. (12.8)

conjugate acid A base to which a proton has been added. (16.3)

conjugate acid–base pair Two substances related to each other by the transfer of a proton. (16.3)

conjugate base An acid from which a proton has been removed. (16.3)

constructive interference The interaction of waves from two sources that align with overlapping crests, resulting in a wave of greater amplitude. (2.2)

conversion factor A factor used to convert between two different units; a conversion factor can be constructed from any two quantities known to be equivalent. (E.7)

coordinate covalent bond The bond formed when a ligand donates electrons to an empty orbital of a metal in a complex ion. (22.3)

coordination compound A neutral compound made when a complex ion combines with one or more counterions. (22.3)

coordination isomers Isomers of complex ions that occur when a coordinated ligand exchanges places with the uncoordinated counterion. (22.4)

coordination number The number of atoms with which each atom in a crystal lattice is in direct contact. (12.3)

coordination number (secondary valence) The number of molecules or ions directly bound to the metal atom in a complex ion. (22.3)

copolymer A polymer composed of two different monomers. (12.9)

core electrons Those electrons in a complete principal energy level and those in complete d and f sublevels. (3.4)

corrosion The gradual, nearly always undesired, oxidation of metals that occurs when metals are exposed to oxidizing agents in the environment. (19.9)

Coulomb's law The law that states that the potential energy (E) of two charged particles depends on their charges (q_1 and q_2) and on their separation (r): $E = \frac{1}{4\pi\epsilon_0} \frac{q_1 q_2}{r}$. (3.3)

covalent bond A chemical bond in which two atoms share electrons that interact with the nuclei of both atoms, lowering the potential energy of each through electrostatic interactions. (4.2)

covalent radius (bonding atomic radius) In nonmetals, one-half the distance between two atoms bonded together, and in metals, one-half the distance between two adjacent atoms in a crystal of the metal. (3.6)

critical mass The amount of a radioactive isotope required to produce a self-sustaining fission reaction. (20.7)

critical point The temperature and pressure above which a supercritical fluid exists. (11.6)

critical pressure (P_c) The pressure required to bring about a transition to a liquid at the critical temperature. (11.5)

critical temperature (T_c) The temperature above which a liquid cannot exist, regardless of pressure. (11.5)

crystal field theory A bonding model for coordination compounds that focuses on the interactions between ligands and the central metal ion. (22.1)

crystalline Describes a solid in which atoms, molecules, or ions are arranged in patterns with long-range, repeating order. (11.2)

crystalline lattice The regular arrangement of atoms in a crystalline solid. (12.3)

cubic closest packing A closest-packed arrangement in which the third layer of atoms is offset from the first; the same structure as the face-centered cubic. (12.3)

cyclotron A particle accelerator in which a charged particle is accelerated in an evacuated ring-shaped tube by an alternating voltage applied to each semicircular half of the ring. (20.10)

Dalton's law of partial pressures The law that states that the sum of the partial pressures of the components in a gas mixture must equal the total pressure. (10.7)

de Broglie relation The observation that the wavelength of a particle is inversely proportional to its momentum $\lambda = \frac{h}{mv}$. (2.4)

degenerate Describes two or more electron orbitals with the same value of n that have the same energy. (3.3)

density (d) The ratio of an object's mass to its volume. (E.5)

deposition The phase transition from gas to solid. (11.6)

derived unit A unit that is a combination of other base units. For example, the SI unit for speed is meters per second (m/s), a derived unit. (E.2)

destructive interference The interaction of waves from two sources that are aligned so that the crest of one overlaps the trough of the other, resulting in cancellation. (2.2)

deterministic A characteristic of the classical laws of motion, which imply that present circumstances determine future events. (2.4)

dextrorotatory Capable of rotating the plane of polarization of light clockwise. (21.3)

diamagnetic The state of an atom or ion that contains only paired electrons and is, therefore, slightly repelled by an external magnetic field. (3.7)

diamond An elemental form of carbon with a crystal structure that consists of carbon atoms connected to four other carbon atoms at the corners of a tetrahedron, creating a strong network covalent solid. (12.6)

diffraction The phenomena by which a wave emerging from an aperture spreads out to form a new wave front. (2.2)

diffusion The process by which a gas spreads through a space occupied by another gas. (10.9)

dilute solution A solution that contains a very small amount of solute relative to the amount of solvent. (8.2, 13.5)

dimensional analysis The use of units as a guide to solving problems. (E.7)

dimer The product that forms from the reaction of two monomers. (12.9)

diode A device that allows the flow of electrical current in only one direction. (12.8)

dipole moment (μ) A measure of the separation of positive and negative charge in a molecule. (5.2)

dipole-dipole force An intermolecular force exhibited by polar molecules that results from the uneven charge distribution. (11.3)

diprotic acid An acid that contains two ionizable protons. (8.7, 16.5)

dispersion force (London force) An intermolecular force exhibited by all atoms and molecules that results from fluctuations in the electron distribution. (11.3)

dose The amount of energy absorbed by bodily tissues as a result of exposure to radiation. (20.11)

double bond The bond that forms when two electrons are shared between two atoms. (4.7)

dry-cell battery A battery that does not contain a large amount of liquid water, often using the oxidation of zinc and the reduction of MnO_2 to provide the electrical current. (19.7)

duet A Lewis structure with two dots, signifying a filled outer electron shell for the elements H and He. (4.4)

dynamic equilibrium The point at which the rate of the reverse reaction or process equals the rate of the forward reaction or process. (11.5, 13.4, 15.2)

effective nuclear charge (Z_{eff}) The actual nuclear charge experienced by an electron, defined as the charge of the nucleus plus the charge of the shielding electrons. (3.3)

effusion The process by which a gas escapes from a container into a vacuum through a small hole. (10.9)

electrical charge A fundamental property of certain particles that causes them to experience a force in the presence of electric fields. (1.6)

electrical current The flow of electric charge. (19.3)

electrochemical cell A device in which a chemical reaction either produces or is carried out by an electrical current. (19.3)

electrolysis The process by which electrical current is used to drive an otherwise nonspontaneous redox reaction. (19.8)

electrolyte A substance that dissolves in water to form solutions that conduct electricity. (8.4)

electrolytic cell An electrochemical cell that uses electrical current to drive a nonspontaneous chemical reaction. (19.3)

electromagnetic radiation A form of energy embodied in oscillating electric and magnetic fields. (2.2)

electromagnetic spectrum The range of the wavelengths of all possible electromagnetic radiation. (2.2)

electromotive force (emf) The force that results in the motion of electrons due to a difference in potential. (19.3)

electron A negatively charged, low-mass particle found outside the nucleus of all atoms that occupies most of the atom's volume but contributes almost none of its mass. (1.6)

electron affinity (EA) The energy change associated with the gaining of an electron by an atom in its gaseous state. (3.8)

electron capture The form of radioactive decay that occurs when a nucleus assimilates an electron from an inner orbital. (20.3)

electron configuration A notation that shows the particular orbitals that are occupied by electrons in an atom. (3.3)

electron geometry The geometrical arrangement of electron groups in a molecule. (5.8)

electron groups A general term for lone pairs, single bonds, multiple bonds, or lone electrons in a molecule. (5.7)

electron sea model A model for bonding in metals in which the metal is viewed as an array of positive ions immersed in a sea of electrons. (12.4)

electron spin A fundamental property of electrons; spin can have a value of $\pm 1/2$. (2.5)

electronegativity The ability of an atom to attract electrons to itself in a covalent bond. (5.2)

element A substance that cannot be chemically broken down into simpler substances. (1.2)

elementary step An individual step in a reaction mechanism. (14.7)

elimination reaction A reaction in which two molecules join together while eliminating a small molecule such as water. (21.9)

emission spectrum The range of wavelengths emitted by a particular element; used to identify the element. (2.3)

empirical formula A chemical formula that shows the simplest whole-number ratio of atoms in the compound. (4.3)

empirical formula molar mass The sum of the masses of all the atoms in an empirical formula. (4.11)

enantiomers (optical isomers) Two molecules that are nonsuperimposable mirror images of one another. (21.3)

endothermic Describes a process that absorbs heat from its surroundings. (E.6)

endothermic reaction A chemical reaction that absorbs heat from its surroundings; for an endothermic reaction, $\Delta H > 0$. (9.6)

endpoint The point of pH change where an indicator changes color. (17.4)

energy The capacity to do work. (E.6, 9.2)

English system The system of units used in the United States and various other countries in which the inch is the unit of length, the pound is the unit of force, and the ounce is the unit of mass. (E.2)

enthalpy (H) The sum of the internal energy of a system and the product of its pressure and volume. (9.6)

enthalpy (heat) of reaction (ΔH_{rxn}) The heat that is emitted or absorbed during a chemical reaction under conditions of constant pressure. (9.6)

enthalpy of solution (ΔH_{soln}) The heat that is emitted or absorbed during a solution formation under conditions of constant pressure. (13.3)

entropy (S) A thermodynamic function that is proportional to the number of energetically equivalent ways to arrange the components of a system to achieve a particular state; a measure of the energy randomization or energy dispersal in a system. (13.2, 18.3)

enzyme A biochemical catalyst made of protein that increases the rates of biochemical reactions. (14.8)

equilibrium constant (K) The ratio, at equilibrium, of the concentrations of the products of a reaction raised to their stoichiometric coefficients to the concentrations of the reactants raised to their stoichiometric coefficients. (15.3)

equivalence point The point in a titration at which the added solute completely reacts with the solute present in the solution; for acid–base titrations, the point at which the amount of acid is stoichiometrically equal to the amount of base in solution. (8.7, 17.4)

ester A member of the family of organic compounds with the general structure $\text{R}-\text{COO}-\text{R}$. (21.11)

ether A member of the family of organic compounds of the form $\text{R}-\text{O}-\text{R}$. (21.12)

exact numbers Numbers that have no uncertainty and thus do not limit the number of significant figures in any calculation. (E.4)

exothermic Describes a process that releases heat to its surroundings. (E.5)

exothermic reaction A chemical reaction that releases heat to its surroundings; for an exothermic reaction, $\Delta H < 0$. (9.6)

experiment A highly controlled procedure designed to generate observations that may support a hypothesis or prove it wrong. (1.3)

exponential factor A number between zero and one that represents the fraction of molecules that have enough energy to make it over the activation barrier on a given approach. (14.6)

exposure The number of radioactive decay events to which a person is exposed. (20.11)

extensive property A property that depends on the amount of a given substance, such as mass. (E.5)

face-centered cubic A crystal structure in which the unit cell consists of a cube with one atom at each corner and one atom in the center of every face. (12.3)

family (group) On the periodic table, one of the columns within the main group elements; a family or group of elements exhibits similar chemical properties. (3.2)

Faraday's constant (F) The charge in coulombs of 1 mol of electrons:

$$F = \frac{96,485 \text{ C}}{\text{mol e}^-}. \quad (19.5)$$

first law of thermodynamics The law that states that the total energy of the universe is constant. (9.3)

formal charge The charge that an atom in a Lewis structure would have if all the bonding electrons were shared equally between the bonded atoms. (5.4)

formation constant (K_f) The equilibrium constant associated with reactions for the formation of complex ions. (17.7)

formula mass The average mass of a molecule of a compound in amu. (4.9)

formula unit The smallest, electrically neutral collection of ions in an ionic compound. (4.5)

free energy of formation (ΔG_f°) The change in free energy when 1 mol of a compound forms from its constituent elements in their standard states. (18.8)

free energy change of a reaction under nonstandard conditions The change in free energy when 1 mol of a compound in its standard state forms from its constituent elements in their standard states; the free energy of formation of pure elements in their standard states is zero. (18.8)

free radical A molecule or ion with an odd number of electrons in its Lewis structure. (5.5)

freezing The phase transition from liquid to solid. (11.6)

freezing point depression The effect of a solute that causes a solution to have a lower melting point than the pure solvent. (13.6)

frequency (ν) For waves, the number of cycles (or complete wavelengths) that pass through a stationary point in one second. (2.2)

frequency factor (A) The number of times that reactants approach the activation energy per unit time. (14.6)

fuel cell A voltaic cell that uses the oxidation of hydrogen and the reduction of oxygen, forming water, to provide electrical current. (19.7)

fullerenes Carbon clusters, such as C_{60} , bonded in roughly spherical shapes containing from 36 to over 100 carbon atoms. (12.6)

functional group A characteristic atom or group of atoms that imparts certain chemical properties to an organic compound. (21.8)

gamma (γ) ray The form of electromagnetic radiation with the shortest wavelength and highest energy. (2.2, 18.3)

gamma (γ) ray emission The form of radioactive decay that occurs when an unstable nucleus emits extremely high-frequency electromagnetic radiation. (20.3)

gas The state of matter in which atoms or molecules have a great deal of space between them and are free to move relative to one another; lacking a definite shape or volume, a gas conforms to the shape and volume of its container. (1.2)

gas-evolution reaction A reaction in which two aqueous solutions are mixed and a gas forms, resulting in bubbling. (8.8)

Geiger-Müller counter A device used to detect radioactivity that uses argon atoms, which become ionized in the presence of energetic particles to produce an electrical signal. (20.5)

geometric (cis-trans) isomerism A form of stereoisomerism involving the orientation of functional groups in a molecule that contains bonds incapable of rotating. (21.5)

geometric isomers For complex ions, isomers that result when the ligands bonded to the metal have a different spatial arrangement. (22.4)

Gibbs free energy (G) A thermodynamic state function related to enthalpy and entropy by the equation $G = H - TS$; chemical systems tend toward lower Gibbs free energy, also called the *chemical potential*. (18.6)

glass An amorphous form of silica. (12.7)

Graham's law of effusion The law that states the ratio of effusion of two different gases is inversely proportional to the square root of the ratio of their molar masses. (10.9)

graphene A fullerene consisting of bonded carbon atoms in sheet form one atom thick. (12.1)

graphite An elemental form of carbon consisting of flat sheets of carbon atoms, bonded together as interconnected hexagonal rings held together by intermolecular forces, that can easily slide past each other. (12.6)

ground state The lowest energy state of an atom or molecule. (3.3)

half-cell One half of an electrochemical cell in which either oxidation or reduction occurs. (19.3)

half-life ($t_{1/2}$) The time required for the concentration of a reactant or the amount of a radioactive isotope to fall to one-half of its initial value. (14.5)

halogen One of the highly reactive nonmetals in group 7A of the periodic table. (3.5)

heat (q) The flow of energy caused by a temperature difference. (9.2)

heat capacity (C) The quantity of heat required to change a system's temperature by 1 °C. (9.4)

heat of fusion (ΔH_{fus}) The amount of heat required to melt 1 mole of a solid. (11.6)

heat of hydration ($\Delta H_{\text{hydration}}$) The enthalpy change that occurs when 1 mole of gaseous solute ions is dissolved in water. (13.3)

heat (or enthalpy) of reaction (ΔH_{rxn}) The enthalpy change for a chemical reaction. (9.6)

heat (or enthalpy) of vaporization (ΔH_{vap}) The amount of heat required to vaporize one mole of a liquid to a gas. (11.5)

Heisenberg's uncertainty principle The principle stating that due to the wave-particle duality, it is fundamentally impossible to precisely determine both the position and velocity of a particle at a given moment in time. (2.4)

Henderson-Hasselbalch equation The equation used to easily calculate the pH of a buffer solution from the initial concentrations of the buffer components, assuming that the "x is small" approximation is valid;
$$\text{pH} = \text{p}K_{\text{a}} + \log \frac{[\text{base}]}{[\text{acid}]}. \quad (17.2)$$

Henry's law The equation that expresses the relationship between solubility of a gas and pressure; $S_{\text{gas}} = k_{\text{H}}P_{\text{gas}}$. (13.4)

Hess's law The law stating that if a chemical equation can be expressed as the sum of a series of steps, then ΔH_{rxn} for the overall equation is the sum of the heats of reactions for each step. (9.8)

heterogeneous catalysis Catalysis in which the catalyst and the reactants exist in different phases. (14.8)

heterogeneous mixture A mixture in which the composition varies from one region to another. (1.2)

hexagonal closest packing A closest-packed arrangement in which the atoms of the third layer align exactly over those in the first layer. (12.3)

high-spin complex A complex ion with weak field ligands that have the same number of unpaired electrons as the free metal ion. (22.5)

homogeneous catalysis Catalysis in which the catalyst exists in the same phase as the reactants. (14.8)

homogeneous mixture A mixture with the same composition throughout. (1.2)

Hund's rule The principle stating that when electrons fill degenerate orbitals, they first fill them singly with parallel spins. (3.3)

hybrid orbitals Orbitals that form from the combination of standard atomic orbitals and that correspond more closely to the actual distribution of electrons in a chemically bonded atom. (6.3)

hybridization A mathematical procedure in which standard atomic orbitals are combined to form new, hybrid orbitals. (6.3)

hydrate An ionic compound that contains a specific number of water molecules associated with each formula unit. (4.6)

hydrocarbon An organic compound that contains only carbon and hydrogen. (4.12)

hydrogen bond A strong dipole-dipole attractive force between a hydrogen bonded to O, N, or F and one of these electronegative atoms on a neighboring molecule. (11.3)

hydrogen bonding The forming of a hydrogen bond. (11.3)

hydrogenation The catalyzed addition of hydrogen to alkene double bonds to make single bonds. (14.8)

hydronium ion H_3O^+ , the ion formed from the association of a water molecule with an H^+ ion donated by an acid. (8.7, 16.3)

hydroxyl group In organic chemistry, an —OH group. (21.9)

hypothesis A tentative interpretation or explanation of an observation. A good hypothesis is *falsifiable*. (1.3)

hypoxia A physiological condition caused by low levels of oxygen, marked by dizziness, headache, shortness of breath, and eventually unconsciousness or even death in severe cases. (10.7)

ideal gas A gas in which interactions between particles and particles size are both negligible; a gas that behaves as described by the ideal gas law. (10.5)

ideal gas constant The proportionality constant of the ideal gas law, R , equal to 8.314 J/mol · K or 0.08206 L · atm/mol · K. (10.5)

ideal gas law The law that combines the relationships of Boyle's, Charles's, and Avogadro's laws into one comprehensive equation of state with the proportionality constant R in the form $PV = nRT$. (10.5)

ideal solution A solution that follows Raoult's law at all concentrations for both solute and solvent. (13.6)

indeterminacy The principle stating that present circumstances do not necessarily determine future events in the quantum-mechanical realm. (2.4)

indicator A dye whose color depends on the pH of the solution in which it is dissolved; often used to detect the endpoint of a titration. (8.7, 17.4)

infrared (IR) radiation Electromagnetic radiation emitted from warm objects, with wavelengths slightly larger than those of visible light. (2.2)

insoluble Describes a compound that is incapable of dissolving in water or is extremely difficult to dissolve in water. (8.4)

integrated rate law A relationship between the concentrations of the reactants in a chemical reaction and time. (14.5)

intensive property A property such as density that is independent of the amount of a given substance. (E.5)

interference The superposition of two or more waves overlapping in space, resulting in either an increase in amplitude (constructive interference) or a decrease in amplitude (destructive interference). (2.2)

internal energy (E) The sum of the kinetic and potential energies of all the particles that compose a system. (9.3)

International System of Units (SI) The standard unit system used by scientists; based on the metric system. (E.2)

ion An atom or molecule with a net charge caused by the loss or gain of electrons. (1.8)

ion product constant for water (K_w) The equilibrium constant for the autoionization of water. (16.6)

ion-dipole force An intermolecular force between an ion and the oppositely charged end of a polar molecule. (11.3)

ionic bond A chemical bond formed between two oppositely charged ions, generally a metallic cation and a nonmetallic anion, that are attracted to one another by electrostatic forces. (4.2)

ionic compound A compound composed of cations and anions bound together by electrostatic attraction. (4.2)

ionic solid A solid whose composite units are ions; ionic solids generally have high melting points. (12.4)

ionization energy (IE) The energy required to remove an electron from an atom or ion in its gaseous state. (3.7)

ionizing power The ability of radiation to ionize molecules and atoms. (20.3)

isomer One of two or more molecules with the same chemical formula, but with a different structure. (6.3)

isotope One of two or more atoms of the same element with the same number of protons but different numbers of neutrons and consequently different masses. (1.8)

joule (J) The SI unit for energy: equal to $1 \text{ kg} \cdot \text{m}^2/\text{s}^2$. (E.6)

kelvin (K) The SI standard unit of temperature. (E.2)

Kelvin scale The temperature scale that assigns 0 K (-273°C or -459°F) to the coldest temperature possible, absolute zero, which is the temperature at which molecular motion virtually stops: $1 \text{ K} = 1^\circ\text{C}$. (E.2)

ketone A member of the family of organic compounds that contain a carbonyl functional group ($\text{C}=\text{O}$) bonded to two R groups, neither of which is a hydrogen atom. (21.10)

kilogram (kg) The SI standard unit of mass defined as the mass of a block of metal kept at the International Bureau of Weights and Measures at Sèvres, France. (E.2)

kilowatt-hour (kWh) An energy unit used primarily to express large amounts of energy produced by the flow of electricity; equal to $3.60 \times 10^6 \text{ J}$. (E.6)

kinetic energy The energy associated with motion of an object. (E.6, 9.2)

kinetic molecular theory A model of an ideal gas as a collection of point particles in constant motion undergoing completely elastic collisions. (10.2)

lanthanide contraction The trend toward leveling off in size of the atoms in the third and fourth transition rows due to the ineffective shielding of the *f* sublevel electrons. (22.2)

lattice energy The energy associated with forming a crystalline lattice from gaseous ions. (4.5)

law See *scientific law*.

law of conservation of energy The law stating that energy can neither be created nor destroyed, only converted from one form to another. (E.6, 9.2)

law of conservation of mass The law stating that matter is neither created nor destroyed in a chemical reaction. (1.3)

law of definite proportions The law stating that all samples of a given compound have the same proportions of their constituent elements. (1.5)

law of mass action The relationship between the balanced chemical equation and the expression of the equilibrium constant. (15.3)

law of multiple proportions The law stating that when two elements (A and B) form two different compounds, the masses of element B that combine with one gram of element A can be expressed as a ratio of small whole numbers. (1.5)

Le Châtelier's principle The principle stating that when a chemical system at equilibrium is disturbed, the system shifts in a direction that minimizes the disturbance. (15.9)

lead-acid storage battery A battery that uses the oxidation of lead and the reduction of lead(IV) oxide in sulfuric acid to provide electrical current. (19.7)

leaded glass A type of glass (often called *crystal*) that contains PbO. This type of glass has a higher index of refraction (it bends light more than ordinary glass), which results in more brilliant-looking glassware. (12.7)

levorotatory Capable of rotating the polarization of light counterclockwise. (21.3)

Lewis acid An atom, ion, or molecule that is an electron pair acceptor. (14.11)

Lewis base An atom, ion, or molecule that is an electron pair donor. (14.11)

Lewis electron-dot structure (Lewis structure) A drawing of a molecule that represents chemical bonds between atoms as shared or transferred electrons; the valence electrons of atoms are represented as dots. (4.4)

Lewis model A simple model of chemical bonding that uses diagrams to represent bonds between atoms as lines or pairs of dots. In this model, atoms bond together to obtain stable octets (eight valence electrons). (4.4)

Lewis symbol A symbol of an element in which dots represent valence electrons. (4.4)

ligand A neutral molecule or an ion that acts as a Lewis base with the central metal ion in a complex ion. (17.7, 22.3)

limiting reactant The reactant that has the smallest stoichiometric amount in a reactant mixture and consequently limits the amount of product in a chemical reaction. (7.5)

linear accelerator A particle accelerator in which a charged particle is accelerated in an evacuated tube by a potential difference between the ends of the tube or by alternating charges in sections of the tube. (20.10)

linear geometry The molecular geometry of three atoms that form a 180° bond angle which results from the repulsion of two electron groups. (5.7)

linkage isomers Isomers of complex ions that occur when some ligands coordinate to the metal in different ways. (22.4)

liquid The state of matter in which atoms or molecules pack about as closely as they do in solid matter but are free to move relative to each other, resulting in a fixed volume but not a fixed shape. (1.2)

liter (L) A unit of volume equal to 1000 cm^3 or 1.057 qt. (E.2)

lithium ion battery A battery that produces electrical current in the form of motion of lithium ions from the anode to the cathode. (19.7)

lone pair (nonbonding electrons) A pair of electrons associated with only one atom. (4.7)

low-spin complex A complex ion that has strong field ligands and has fewer unpaired electrons relative to the free metal ion. (22.5)

macrostate The overall state of a system as defined by a given set of conditions (such as P , V , and T). (18.3)

magic numbers Certain numbers of nucleons (N or $Z = 2, 8, 20, 28, 50, 82$, and $N = 126$) that confer unique stability. (20.4)

magnetic quantum number (m_l) An integer that specifies the orientation of an orbital. (2.5)

main-group element One of the elements found in the s or p block of the periodic table, whose properties tend to be predictable based on their position in the table. (3.2)

manometer An instrument used to determine the pressure of a gaseous sample, consisting of a liquid-filled U-shaped tube with one end exposed to the ambient pressure and the other end connected to the sample. (10.3)

mass A measure of the quantity of matter making up an object. (E.2)

mass defect The difference in mass between the nucleus of an atom and the sum of the separated particles that make up that nucleus. (20.8)

mass number (A) The sum of the number of protons and neutrons in an atom. (1.8)

mass percent composition (mass percent) An element's percentage of the total mass of a compound containing the element. (4.10)

mass spectrometry An experimental method of determining the precise mass and relative abundance of isotopes in a given sample using an instrument called a *mass spectrometer*. (1.9)

matter Anything that occupies space and has mass. (1.1)

mean free path The average distance that a molecule in a gas travels between collisions. (10.9)

melting (fusion) The phase transition from solid to liquid. (11.6)

melting point The temperature at which the molecules of a solid have enough thermal energy to overcome intermolecular forces and become a liquid. (11.6)

metal A member of a large class of elements that are generally good conductors of heat and electricity, are malleable, ductile, and lustrous, and tend to lose electrons during chemical changes. (3.5)

metallic atomic solid An atomic solid held together by metallic bonds; metallic atomic solids have variable melting points. (12.4)

metalloid A member of a category of elements found on the boundary between the metals and nonmetals of the periodic table, with properties intermediate between those of both groups; metalloids are also called *semimetals*. (3.5)

meter (m) The SI standard unit of length; equivalent to 39.37 inches. (E.2)

metric system The system of measurements used in most countries in which the meter is the unit of length, the kilogram is the unit of mass, and the second is the unit of time. (E.2)

microstate The exact distribution of internal energy at any one instant among the particles that compose a system. (18.3)

microwaves Electromagnetic radiation with wavelengths slightly longer than those of infrared radiation; used for radar and in microwave ovens. (2.2)

milliliter (mL) A unit of volume equal to 10^{-3} L or 1 cm^3 . (E.2)

millimeter of mercury (mmHg) A common unit of pressure referring to the air pressure required to push a column of mercury to a height of 1 mm in a barometer; $760\text{ mmHg} = 1\text{ atm}$. (10.2)

miscibility The ability of substances to mix without separating into two phases. (11.3)

miscible The ability of two or more substances to be soluble in each other in all proportions. (13.2)

mixture A substance composed of two or more different types of atoms or molecules that can be combined in variable proportions. (1.3)

molality (m) A means of expressing solution concentration as the number of moles of solute per kilogram of solvent. (13.5)

molar heat capacity The amount of heat required to raise the temperature of one mole of a substance by 1°C . (9.4)

molar mass The mass in grams of one mole of atoms of an element; numerically equivalent to the atomic mass of the element in amu. (1.10)

molar solubility The solubility of a compound in units of moles per liter. (17.5)

molar volume The volume occupied by one mole of a gas; the molar volume of an ideal gas at STP is 22.4 L. (10.6)

molarity (M) A means of expressing solution concentration as the number of moles of solute per liter of solution. (8.2, 13.5)

mole (mol) A unit defined as the amount of material containing 6.0221421×10^{23} (Avogadro's number) particles. (1.10)

mole fraction (χ_A) The number of moles of a component in a mixture divided by the total number of moles in the mixture; a means of expressing solution concentration as the amount of solute in moles per total amount of solute and solvent in moles. (10.7, 13.5)

mole percent (mol %) A means of expressing solution concentration as the mole fraction multiplied by 100%. (13.5)

molecular compound A compound composed of two or more covalently bonded nonmetals. (4.2)

molecular element One of a group of elements that exist in nature with diatomic or polyatomic molecules as their basic unit. (2.4)

molecular equation An equation showing the complete neutral formula for each compound in a reaction. (8.6)

molecular formula A chemical formula that shows the actual number of atoms of each element in a molecule of a compound. (4.3)

molecular geometry The geometrical arrangement of atoms in a molecule. (5.8)

molecular orbital (MO) A mathematical function that represents a state of an electron in a molecule. (6.4)

molecular orbital (MO) diagram An energy diagram showing the atomic orbitals of the atoms that compose a molecule, the molecular orbitals of the molecule, their relative energies, and the placement of the valence electrons in the molecular orbitals. (6.4)

molecular orbital (MO) theory An advanced model of chemical bonding in which electrons reside in molecular orbitals delocalized over the entire molecule. In the simplest version, the molecular orbitals are simply linear combinations of atomic orbitals. (6.4)

molecular solid A solid whose composite units are molecules; molecular solids generally have low melting points. (12.4)

molecularity The number of reactant particles involved in an elementary step. (14.7)

molecule Two or more atoms joined chemically in a specific geometrical arrangement. (1.1)

monodentate Describes ligands that donate only one electron pair to the central metal. (22.3)

monomer A repeating unit in a polymer. (12.9)

monoprotic acid An acid that contains only one ionizable proton. (16.5)

nanotube A long, tubular structure consisting of interconnected C_6 rings. (12.7)

natural abundance The relative percentage of a particular isotope in a naturally occurring sample with respect to other isotopes of the same element. (1.8)

Nernst equation The equation relating the cell potential of an electrochemical cell to the standard cell potential and the reaction quotient;

$$E_{\text{cell}} = E_{\text{cell}}^{\circ} - \frac{0.0592 \text{ V}}{n} \log Q. \quad (19.6)$$

net ionic equation An equation that shows only the species that actually change during a reaction. (8.6)

network covalent atomic solid An atomic solid held together by covalent bonds; network covalent atomic solids have high melting points. (12.4)

neutral Describes the state of a solution in which the concentrations of H_3O^+ and OH^- are equal. (16.6)

neutron An electrically neutral subatomic particle found in the nucleus of an atom, with a mass almost equal to that of a proton. (1.7)

nickel–cadmium (NiCad) battery A battery that consists of an anode composed of solid cadmium and a cathode composed of $\text{NiO}(\text{OH})(\text{s})$ in a KOH solution. (19.7)

nickel–metal hydride (NiMH) battery A battery that uses the same cathode reaction as the NiCad battery but a different anode reaction, the oxidation of hydrogens in a metal alloy. (19.7)

nitrogen narcosis A physiological condition caused by an increased partial pressure of nitrogen, resulting in symptoms similar to those of intoxication. (10.7)

noble gas One of the group 8A elements, which are largely unreactive (inert) due to their stable filled p orbitals. (3.5)

node A point where the wave function (ψ), and therefore the probability density (ψ^2) and radial distribution function, all go through zero (2.6)

nonbonding atomic solid An atomic solid held together by dispersion forces; nonbonding atomic solids have low melting points. (12.4)

nonbonding orbital An orbital whose electrons remain localized on an atom. (6.4)

nonelectrolyte A compound that does not dissociate into ions when dissolved in water. (8.4)

nonmetal A member of a class of elements that tend to be poor conductors of heat and electricity and usually gain electrons during chemical reactions. (3.5)

nonvolatile Not easily vaporized. (11.5)

normal boiling point The temperature at which the vapor pressure of a liquid equals 1 atm. (11.5)

n-type semiconductor A semiconductor that employs negatively charged electrons in the conduction band as the charge carriers. (12.8)

nuclear binding energy The amount of energy required to break apart the nucleus into its component nucleons. (20.8)

nuclear equation An equation that represents nuclear processes such as radioactivity. (20.3)

nuclear fission The splitting of the nucleus of an atom, which results in a tremendous release of energy. (20.7)

nuclear fusion The combination of two light nuclei to form a heavier one. (20.9)

nuclear theory The theory that most of the atom's mass and all of its positive charge are contained in a small, dense nucleus. (1.7)

nucleon One of the particles that compose the nucleus, which are protons and neutrons. (20.4)

nucleus The very small, dense core of the atom that contains most of the atom's mass and all of its positive charge; the nucleus is composed of protons and neutrons. (1.7)

nuclide A particular isotope of an atom. (20.3)

octahedral geometry The molecular geometry of seven atoms with 90° bond angles. (5.7)

octahedral hole A space that exists in the middle of six atoms on two adjacent close-packed sheets of atoms in a crystal lattice. (22.4)

octet A Lewis symbol with eight dots, signifying a filled outer electron shell for s and p block elements. (4.4)

octet rule The tendency for most bonded atoms to possess or share eight electrons in their outer shell in order to obtain stable electron configurations and lower their potential energy. (4.4)

optical isomers Two molecules that are nonsuperimposable mirror images of one another; enantiomers. (21.3, 22.4)

orbital A probability distribution map, based on the quantum-mechanical model of the atom, used to describe the likely position of an electron in an atom; also an allowed energy state for an electron. (2.5)

orbital diagram A diagram similar to an electron configuration that symbolizes an electron as an arrow in a box representing an orbital, with the arrow's direction denoting the electron's spin. (3.3)

organic chemistry The study of carbon-based compounds. (21.1)

organic compound A compound containing carbon combined with several other elements including hydrogen, nitrogen, oxygen, or sulfur. (4.12)

organic molecule A molecule containing carbon combined with several other elements including hydrogen, nitrogen, oxygen, or sulfur. (21.1)

orientation factor In collision theory, a variable that is a measure of how specific the orientation of the colliding molecules must be. A large orientation factor (near 1) indicates that the colliding molecules can have virtually any orientation and the reaction will still occur. A small orientation factor indicates that the colliding molecules must have a highly specific orientation for the reaction to occur. (14.6)

osmosis The flow of solvent from a solution of lower solute concentration to one of higher solute concentration. (13.6)

osmotic pressure The pressure required to stop osmotic flow. (13.6)

overall order The sum of the orders of all reactants in a chemical reaction. (14.4)

oxidation The loss of one or more electrons; also the gaining of oxygen or the loss of hydrogen. (8.9)

oxidation state (oxidation number) A positive or negative whole number that represents the "charge" that an atom in a compound would have if all shared electrons were assigned to the atom that holds a greater attraction for those electrons. (8.9)

oxidation–reduction (redox) reaction A reaction in which electrons are transferred from one reactant to another and the oxidation states of certain atoms are changed. (8.9)

oxidizing agent A substance that causes the oxidation of another substance; an oxidizing agent gains electrons and is reduced. (8.9)

oxyacid An acid composed of hydrogen and an oxyanion. (8.7)

oxyanion A polyatomic anion containing a nonmetal covalently bonded to one or more oxygen atoms. (4.6)

oxygen toxicity A physiological condition caused by an increased level of oxygen in the blood, resulting in muscle twitching, tunnel vision, and convulsions. (10.7)

packing efficiency The percentage of volume of a unit cell occupied by the atoms, assumed to be spherical. (12.3)

paramagnetic The state of an atom or ion that contains unpaired electrons and is, therefore, attracted by an external magnetic field. (3.7)

partial pressure (P_n) The pressure due to any individual component in a gas mixture. (10.7)

parts by mass A unit for expressing solution concentration as the mass of the solute divided by the mass of the solution multiplied by a multiplication factor. (13.5)

parts by volume A unit for expressing solution concentration as the volume of the solute divided by the volume of the solution multiplied by a multiplication factor. (13.5)

parts per billion (ppb) A unit for expressing solution concentration in parts by mass in which the multiplication factor is 10^9 . (13.5)

parts per million (ppm) A unit for expressing solution concentration in parts by mass in which the multiplication factor is 10^6 . (13.5)

pascal (Pa) The SI unit of pressure, defined as 1 N/M^2 . (10.2)

Pauli exclusion principle The principle stating that no two electrons in an atom can have the same four quantum numbers. (3.3)

penetrating power The ability of radiation to penetrate matter. (20.3)

penetration The phenomenon in which some higher-level atomic orbitals have significant amounts of probability within the space occupied by orbitals of lower energy level. For example, the 2s orbital penetrates into the 1s orbital. (3.3)

percent by mass A unit for expressing solution concentration in parts by mass with a multiplication factor of 100%. (13.5)

percent ionic character The ratio of a bond's actual dipole moment to the dipole moment it would have if the electron were transferred completely from one atom to the other, multiplied by 100%. (5.2)

percent ionization The concentration of ionized acid in a solution divided by the initial concentration of acid multiplied by 100%. (16.7)

percent yield The percentage of the theoretical yield of a chemical reaction that is actually produced; the ratio of the actual yield to the theoretical yield multiplied by 100%. (7.5)

periodic law The law based on the observation that when the elements are arranged in order of increasing mass, certain sets of properties recur periodically. (3.2)

periodic property A property of an element that is predictable based on an element's position in the periodic table. (3.1)

periodic table The table that arranges all known elements in order of increasing atomic number; elements with similar properties generally fall into columns on the periodic table. (1.8)

permanent dipole A permanent separation of charge; a molecule with a permanent dipole always has a slightly negative charge at one end and a slightly positive charge at the other. (11.3)

pH The negative log of the concentration of H_3O^+ in a solution; the pH scale is a compact way to specify the acidity of a solution. (16.6)

phase With regard to waves and orbitals, the sign of the amplitude of the wave, which can be positive or negative. (2.6)

phase diagram A map of the state (or phase) of a substance as a function of pressure and temperature. (11.8)

phenyl group A benzene ring treated as a substituent. (21.7)

phosphorescence The long-lived emission of light that sometimes follows the absorption of light by certain atoms and molecules. (20.2)

photoelectric effect The observation that many metals emit electrons when light falls upon the metal. (2.2)

photon (quantum) The smallest possible packet of electromagnetic radiation with an energy equal to $h\nu$. (2.2)

physical change A change that alters the state or appearance of a substance but not its chemical composition. (7.2)

physical property A property that a substance displays without changing its chemical composition. (7.2)

pi (π) bond The bond that forms between two p orbitals that overlap side to side. (6.3)

p-n junctions Tiny areas in electronic circuits that have p-type semiconductors on one side and n-type on the other. (12.8)

polar covalent bond A covalent bond between two atoms with significantly different electronegativities, resulting in an uneven distribution of electron density. (5.2)

polyatomic ion An ion composed of two or more atoms. (4.6)

polydentate Describes ligands that donate more than one electron pair to the central metal. (22.3)

polymer A long chain-like molecule composed of many repeating units. (12.9)

polyprotic acid An acid that contains more than one ionizable proton and releases them sequentially. (8.7, 16.8)

Portland cement A powdered mixture consisting mostly of limestone (CaCO_3) and silica (SiO_2), with smaller amounts of alumina (Al_2O_3), iron(III) oxide (Fe_2O_3), and gypsum ($\text{CaSO}_4 \cdot 2 \text{H}_2\text{O}$). (12.7)

positron The particle released in positron emission; equal in mass to an electron but opposite in charge. (20.3)

positron emission The form of radioactive decay that occurs when an unstable nucleus emits a positron. (20.3)

positron emission tomography (PET) A specialized imaging technique that employs positron-emitting nuclides, such as fluorine-18, as a radio-tracer. (20.12)

potential difference A measure of the difference in potential energy (usually in joules) per unit of charge (coulombs). (19.3)

potential energy The energy associated with the position or composition of an object. (E.6, 9.2)

precipitate A solid, insoluble ionic compound that forms in, and separates from, a solution. (8.5)

precipitation reaction A reaction in which a solid, insoluble product forms upon mixing two solutions. (8.5)

precision A term that refers to how close a series of measurements are to one another or how reproducible they are. (E.3)

prefix multipliers Multipliers that change the value of the unit by powers of ten. (E.2)

pressure A measure of force exerted per unit area; in chemistry, most commonly the force exerted by gas molecules as they strike the surfaces around them. (10.1)

pressure-volume work The work that occurs when a volume change takes place against an external pressure. (9.4)

primary valence The oxidation state on the central metal atom in a complex ion. (22.3)

principal level (shell) The group of orbitals with the same value of n . (2.5)

principal quantum number (n) An integer that specifies the overall size and energy of an orbital; the higher the quantum number n , the greater the average distance between the electron and the nucleus and the higher its energy. (2.5)

probability density The probability (per unit volume) of finding the electron at a point in space as expressed by a three-dimensional plot of the wave function squared (ψ^2). (2.6)

product A substance produced in a chemical reaction; products appear on the right-hand side of a chemical equation. (7.3)

proton A positively charged subatomic particle found in the nucleus of an atom. (1.7)

p-type semiconductor A semiconductor that employs positively charged "holes" in the valence band as the charge carriers. (12.8)

pure substance A substance composed of only one type of atom or molecule. (1.2)

quantum number One of four interrelated numbers that determine the shape and energy of orbitals, as specified by a solution of the Schrödinger equation. (2.5)

quantum-mechanical model A model that explains the behavior of absolutely small particles such as electrons and photons. (2.1)

quartz A silicate crystal that has a formula unit of SiO_2 . (12.6)

racemic mixture An equimolar mixture of two optical isomers that does not rotate the plane of polarization of light at all. (21.3)

radial distribution function A mathematical function that represents the total probability of finding the electron within a thin spherical shell at a distance r from the nucleus in an atom. (2.6)

radio wave The form of electromagnetic radiation with the longest wavelengths and smallest energy. (2.2)

radioactive Describes the state of unstable atoms that emit subatomic particles or high-energy electromagnetic radiation. (20.1)

radioactivity The emission of subatomic particles or high-energy electromagnetic radiation by the unstable nuclei of certain atoms. (1.7, 20.1)

radiocarbon dating A form of radiometric dating based on the C-14 isotope. (20.6)

radiometric dating A technique used to estimate the age of rocks, fossils, or artifacts that depends on the presence of radioactive isotopes and the predictable decay of those isotopes over time. (20.6)

radiotracer A radioactive nuclide attached to a compound or introduced into a mixture in order to track the movement of the compound or mixture within the body. (20.12)

random error Error that has equal probability of being too high or too low. (E.3)

Raoult's law The equation used to determine the vapor pressure of a solution; $P_{\text{soln}} = X_{\text{solv}} P_{\text{solv}}^{\circ}$. (13.6)

rate constant (k) The constant of proportionality in the rate law. (14.4)

rate law The relationship between the rate of a reaction and the concentration of the reactants. (14.4)

rate-determining step The step in a reaction mechanism that occurs more slowly than any of the other steps. (14.7)

reactant A starting substance in a chemical reaction; reactants appear on the left-hand side of a chemical equation. (7.3)

reaction intermediate Species that forms in one step of a reaction mechanism and is consumed in another. (14.7)

reaction mechanism A series of individual chemical steps by which an overall chemical reaction occurs. (14.7)

reaction order (n) The value in the rate law that determines how the rate depends on the concentration of the reactants. (14.4)

reaction quotient (Q_c) The ratio, at any point in the reaction, of the concentrations of the products of a reaction raised to their stoichiometric coefficients to the concentrations of the reactants raised to their stoichiometric coefficients. (15.7)

recrystallization A technique used to purify solids in which the solid is put into hot solvent until the solution is saturated; when the solution cools, the purified solute comes out of solution. (13.4)

reducing agent A substance that causes the reduction of another substance; a reducing agent loses electrons and is oxidized. (8.9)

reduction The gaining of one or more electrons; also the gaining of hydrogen or the loss of oxygen. (8.9)

rem The unit of radiation exposure that stands for roentgen equivalent man; a roentgen is the amount of radiation that produces 2.58×10^{-4} C of charge per kg of air. (20.11)

resonance hybrid The actual structure of a molecule that is intermediate between two or more resonance structures. (5.4)

resonance structure One of two or more valid Lewis structures shown with double-headed arrows between them to indicate that the actual structure of the molecule is intermediate between them. (5.4)

reversible As applied to a reaction, describes the ability to proceed in either the forward or the reverse direction. (15.2)

reversible process A process that reverses direction upon an infinitesimally small change in some property. (18.4)

salt An ionic compound formed in a neutralization reaction by the replacement of an H^+ ion from the acid with a cation from the base. (8.7)

salt bridge An inverted, U-shaped tube containing a strong electrolyte such as KNO_3 that connects two half-cells, allowing a flow of ions that neutralizes charge buildup. (19.3)

saturated hydrocarbon A hydrocarbon containing no double bonds in the carbon chain. (21.4)

saturated solution A solution in which the dissolved solute is in dynamic equilibrium with any undissolved solute; any added solute will not dissolve. (13.4)

scientific law A brief statement or equation that summarizes past observations and predicts future ones. (1.3)

scintillation counter A device for the detection of radioactivity that includes a material that emits ultraviolet or visible light in response to excitation by energetic particles. (20.5)

second (s) The SI standard unit of time, defined as the duration of 9,192,631,770 periods of the radiation emitted from a certain transition in a cesium-133 atom. (E.2)

second law of thermodynamics The law stating that for any spontaneous process, the entropy of the universe increases ($\Delta S_{\text{univ}} > 0$). (18.3)

secondary valence The number of molecules or ions directly bound to the metal atom in a complex ion; also called the *coordination number*. (22.3)

seesaw geometry The molecular geometry of a molecule with trigonal bipyramidal electron geometry and one lone pair in an axial position. (5.8)

selective precipitation A process involving the addition of a reagent to a solution that forms a precipitate with one of the dissolved ions but not the others. (17.6)

semiconductor A material with intermediate electrical conductivity that can be changed and controlled. (3.5)

semipermeable membrane A membrane that selectively allows some substances to pass through but not others. (13.6)

shielding The effect on an electron of repulsion by electrons in lower-energy orbitals that screen it from the full effects of nuclear charge. (3.3)

sigma (σ) bond The bond that forms between a combination of any two s, p, or hybridized orbitals that overlap end to end. (6.3)

significant figures (significant digits) In any reported measurement, the non-place-holding digits that indicate the precision of the measured quantity. (E.4)

silica A silicate crystal that has a formula unit of SiO_2 , also called *quartz*. (12.6)

silicate A covalent atomic solid that contains silicon, oxygen, and various metal atoms. (12.6)

simple cubic A unit cell that consists of a cube with one atom at each corner. (12.3)

soda-lime glass A type of glass that is about 70% SiO_2 with the balance being mostly Na_2O and CaO . This type of glass is transparent to visible light (not ultraviolet) and has a high thermal expansion, but it is less expensive to make and form into desired shapes than vitreous silica. (12.7)

solid The state of matter in which atoms or molecules are packed close to one another in fixed locations with definite volume. (1.2)

solubility The amount of a substance that will dissolve in a given amount of solvent. (13.2)

solubility product constant (K_{sp}) The equilibrium expression for a chemical equation representing the dissolution of a slightly to moderately soluble ionic compound. (17.5)

soluble Describes a compound that is able to dissolve to a significant extent, usually in water. (8.4)

solute The minority component of a solution. (8.2, 13.1)

solution A homogeneous mixture of two substances. (8.2, 13.1)

solvent The majority component of a solution. (8.2, 13.1)

space-filling molecular model A representation of a molecule that shows how the atoms fill the space between them. (4.3)

specific heat capacity (C_s) The amount of heat required to raise the temperature of 1 g of a substance by 1 °C (9.4)

spectator ion An ion in a complete ionic equation that does not participate in the reaction and therefore remains in solution. (8.6)

spin quantum number (m_s) The fourth quantum number, which denotes the electron's spin as either 1/2 (up arrow) or -1/2 (down arrow). (2.5)

spontaneous process A process that occurs without ongoing outside intervention. (18.2)

square planar geometry The molecular geometry of a molecule with octahedral electron geometry and two lone pairs. (5.8)

square pyramidal geometry The molecular geometry of a molecule with octahedral electron geometry and one lone pair. (5.8)

standard cell potential (standard emf) (E°_{cell}) The cell potential for a system in standard states (solute concentration of 1 M and gaseous reactant partial pressure of 1 atm). (19.3)

standard change in free energy ($\Delta G^\circ_{\text{rxn}}$) The change in free energy for a process when all reactants and products are in their standard states. (18.8)

standard electrode potential A measure of the potential energy experienced by charged particles at an electrode in an electrochemical cell; the standard cell potential is the difference between the standard electrode potentials of the anode and cathode. (19.4)

standard enthalpy change (ΔH°) The change in enthalpy for a process when all reactants and products are in their standard states. (9.10)

standard enthalpy (or heat) of formation (ΔH°_f) The change in enthalpy when 1 mol of a compound forms from its constituent elements in their standard states. (9.10)

standard entropy change for a reaction ($\Delta S^\circ_{\text{rxn}}$) The change in entropy for a process in which all reactants and products are in their standard states. (18.7)

standard hydrogen electrode (SHE) A half-cell consisting of an inert platinum electrode immersed in 1 M HCl with hydrogen gas at 1 atm bubbling through the solution; used as the standard of a cell potential of zero. (19.4)

standard molar entropy (S°) The measure of the energy dispersed into one mole of a substance at a particular temperature. (18.7)

standard state For a gas the standard state is the pure gas at a pressure of exactly 1 atm; for a liquid or solid the standard state is the pure substance in its most stable form at a pressure of 1 atm and the temperature of interest (often taken to be 25°C); for a substance in solution the standard state is a concentration of exactly 1 M. (9.10)

standard temperature and pressure (STP) Conditions of $T = 0^\circ\text{C}$ (273 K) and $P = 1$ used primarily in reference to a gas. (10.6)

state A classification of a form of matter as a solid, liquid, or gas. (1.2)

state function A function whose value depends only on the state of the system, not on how the system got to that state. (9.3)

stereoisomers Molecules in which the atoms are bonded in the same order but have a different spatial arrangement. (21.3, 22.4)

stock solution A highly concentrated form of a solution used in laboratories to make less concentrated solutions via dilution. (8.2)

stoichiometry The numerical relationships between amounts of reactants and products in a balanced chemical equation. (7.4)

strong acid An acid that completely ionizes in solution. (8.4, 16.3)

strong base A base that completely dissociates in solution. (16.3)

strong electrolyte A substance that completely dissociates into ions when dissolved in water. (8.4)

strong force Of the four fundamental forces of physics, the one that is the strongest but acts over the shortest distance; the strong force is responsible for holding the protons and neutrons together in the nucleus of an atom. (20.4)

strong-field complex A complex ion in which the crystal field splitting is large. (22.5)

structural formula A molecular formula that shows how the atoms in a molecule are connected or bonded to each other. (4.3, 21.3)

structural isomers Molecules with the same molecular formula but different structures. (21.3, 22.4)

sublevel (subshell) Those orbitals in the same principal level with the same value of n and l . (2.5)

sublimation The phase transition from solid to gas. (11.6)

substance A specific instance of matter. (1.2)

substitution reaction A chemical reaction in which one atom or group of atoms takes the place of another atom or group of atoms. (21.6)

substrate The reactant molecule of a biochemical reaction that binds to an enzyme at the active site. (14.8)

supersaturated solution An unstable solution in which more than the equilibrium amount of solute is dissolved. (13.4)

surface tension The energy required to increase the surface area of a liquid by a unit amount; responsible for the tendency of liquids to minimize their surface area, giving rise to a membrane-like surface. (11.4)

surroundings In thermodynamics, everything in the universe that exists outside the system under investigation. (9.2)

system In thermodynamics, the portion of the universe that is singled out for investigation. (9.2)

systematic error Error that tends toward being consistently either too high or too low. (E.3)

systematic name The official name based on well-established rules for a compound, which can be determined by examining its chemical structure. (4.6)

temperature A measure of the average kinetic energy of the atoms or molecules that compose a sample of matter. (E.6)

termolecular Describes an elementary step of a reaction in which three particles collide and go on to form products. (14.7)

tetrahedral geometry The molecular geometry of five atoms with 109.5° bond angles. (5.7)

tetrahedral hole A space that exists directly above the center point of three closest-packed metal atoms in one plane and a fourth metal located directly above the center point in the adjacent plane in a crystal lattice. (12.4)

theoretical yield The greatest possible amount of product that can be produced in a chemical reaction based on the amount of limiting reactant. (7.5)

theory A proposed explanation for observations and laws, based on well-established and tested hypotheses; a theory presents a model of the way nature works and predicts behavior beyond the observations and laws on which it was based. (1.3)

thermal energy The type of kinetic energy associated with the temperature of an object, arising from the motion of individual atoms or molecules in the object; see also *heat*. (E.6, 9.2)

thermal equilibrium The point at which there is no additional net transfer of heat between a system and its surroundings. (9.4)

thermochemistry The study of the relationship between chemistry and energy. (9.1)

thermodynamics The general study of energy and its interconversions. (9.3)

thermoluminescent dosimeter A device used to measure the dose of radiation to which a person is exposed. (20.5)

third law of thermodynamics The law stating that the entropy of a perfect crystal at absolute zero (0 K) is zero. (18.7)

titration A laboratory procedure in which a substance in a solution of known concentration is reacted with another substance in a solution of unknown concentration in order to determine the unknown concentration; see also *acid-base titration*. (8.7)

torr A unit of pressure equivalent to 1/760 of an atmosphere (atm); named after Evangelista Torricelli. (10.3)

transition element (transition metal) One of the elements found in the *d* block of the periodic table whose properties tend to be less predictable based simply on their position in the table. (3.2)

transmutation The transformation of one element into another as a result of nuclear reactions. (20.10)

trigonal bipyramidal geometry The molecular geometry of six atoms with 120° bond angles between the three equatorial electron groups and 90° bond angles between the two axial electron groups and the trigonal plane. (5.7)

trigonal planar geometry The molecular geometry of four atoms with 120° bond angles in a plane. (5.7)

trigonal pyramidal geometry The molecular geometry of a molecule with tetrahedral electron geometry and one lone pair. (5.8)

triple bond A bond that forms when three electron pairs are shared between two atoms. (4.7)

triple point The unique set of conditions at which all three phases of a substance are equally stable and in equilibrium. (11.8)

triprotic acid An acid that contains three ionizable protons. (16.5)

T-shaped geometry The molecular geometry of a molecule with trigonal bipyramidal electron geometry and two lone pairs in axial positions. (5.8)

ultraviolet (UV) radiation Electromagnetic radiation with slightly smaller wavelengths than visible light. (2.2)

unimolecular Describes a reaction that involves only one particle that goes on to form products. (14.7)

unit A standard quantity used to specify measurements. (E.1)

unit cell The smallest divisible unit of a crystal that, when repeated in three dimensions, reproduces the entire crystal lattice. (12.3)

unsaturated hydrocarbon A hydrocarbon that includes one or more double or triple bonds. (21.5)

unsaturated solution A solution containing less than the equilibrium amount of solute; any added solute will dissolve until equilibrium is reached. (13.4)

valence band In band theory, the band of energy levels that forms from bonding molecular orbitals. (12.8)

valence bond theory An advanced model of chemical bonding in which electrons reside in quantum-mechanical orbitals localized on individual atoms that are a hybridized blend of standard atomic orbitals; chemical bonds result from an overlap of these orbitals. (6.2)

valence electrons The electrons that are important in chemical bonding. For main-group elements, the valence electrons are those in the outermost principal energy level. (3.4)

valence shell electron pair repulsion (VSEPR) theory A theory that allows prediction of the shapes of molecules based on the idea that electrons—either as lone pairs or as bonding pairs—repel one another. (5.7)

van der Waals equation The extrapolation of the ideal gas law that considers the effects of intermolecular forces and particle volume in a nonideal gas; $P + a\left(\frac{n}{V}\right)^2 \times (V - nb) = nRT$. (10.11)

van der Waals radius (nonbonding atomic radius) One-half the distance between the centers of adjacent, nonbonding atoms in a crystal. (3.6)

van't Hoff factor (*i*) The ratio of moles of particles in a solution to moles of formula units dissolved. (13.7)

vapor pressure The partial pressure of a vapor that is in dynamic equilibrium with its liquid. (10.7, 11.5)

vaporization The phase transition from liquid to gas. (11.5)

viscosity A measure of the resistance of a liquid to flow. (11.4)

visible light Electromagnetic radiation with frequencies that can be detected by the human eye. (2.2)

vitreous silica (fused silica) A type of glass that is hard, resists high temperatures, has a low thermal expansion, and is transparent to both visible light and ultraviolet light. (12.7)

volatile Tending to vaporize easily. (11.5)

voltaic (galvanic) cell An electrochemical cell that produces electrical current from a spontaneous chemical reaction. (19.3)

volt (V) The SI unit used to measure potential difference; equivalent to 1 J/C. (19.3)

volume (V) A measure of space. Any unit of length, when cubed (raised to the third power), becomes a unit of volume. (E.2)

wave function (ψ) The mathematical function that describes the wave-like nature of the electron. (2.5)

wavelength (λ) The distance between adjacent crests of a wave. (2.2)

weak acid An acid that does not completely ionize in water. (8.4, 16.3)

weak base A base that only partially ionizes in water. (16.3)

weak electrolyte A substance that does not completely ionize in water and only weakly conducts electricity in solution. (8.4)

weak-field complex A complex ion in which the crystal field splitting is small. (22.5)

work (w) The result of a force acting through a distance. (E.6, 9.2)

X-ray Electromagnetic radiation with wavelengths slightly longer than those of gamma rays; used to image bones and internal organs. (2.2)

X-ray diffraction A powerful laboratory technique that allows for the determination of the arrangement of atoms in a crystal and the measuring of the distance between them. (12.2)

This page intentionally left blank

Credits

Photo Credits

Chapter E Page 5 top right: Richard Megna/Fundamental Photographs; Page 6 far left: Yui/Shutterstock; Page 6 top left: Kevron/Fotolia; Page 6 center left: AndrazG/Getty Images; Page 6 far right: Byron W. Moore/Shutterstock; Page 9 top right: Richard Megna/Fundamental Photographs; Page 9 bottom right: Richard Megna/Fundamental Photographs; Page 9 top left: Richard Megna/Fundamental Photographs; Page 9 bottom left: Pearson Education, Inc.; Page 17 center right: Gyvafoto/Shutterstock; Page 29 top left: Warren Rosenberg/Fundamental Photographs; Page 29 top center: Warren Rosenberg/Fundamental Photographs; Page 29 top right: Warren Rosenberg/Fundamental Photographs; Page 29 bottom left: Richard Megna/Fundamental Photographs; Page 29 bottom center: Warren Rosenberg/Fundamental Photographs; Page 29 bottom right: Warren Rosenberg/Fundamental Photographs; Page 32 center left: NASA. **Chapter 1** Page 37: Fotolia; Page 37 top right: Oneo/Fotolia; Page 38 bottom far left: RosaBetancourt/Alamy; Page 38 bottom center left: Cdrcom/Fotolia; Page 38 bottom center right: YinYang/iStock/Getty Images; Page 38 bottom right: Denis Larkin/Getty Images; Page 40 top left: Tomas Abad/Alamy; Page 42 top left: Charles D. Winters/Science Source; Page 42 top center: Charles D. Winters/Science Source; Page 42 top right: Joseph Calev/Shutterstock; Page 45 bottom right: Richard Megna/Fundamental Photographs; Page 50 top left: Hxdbzxy/iStock/Getty Images; Page 51 top left: Ksena32/Fotolia; Page 51 top right: Pearson Education, Inc.; Page 52 top left: Photo Researchers/Alamy Stock Photo; Page 57 right top: Pearson Education, Inc.; Page 57 right bottom: Marek/Fotolia; Page 62 top left: NASA; Page 70 top right: IBM Almaden Research Center; **Chapter 2** Page 77 top right: Excellent Photo/Getty Images; Page 78 top left: Matthias Kulka/Corbis; Page 78 left center: Elena Elisseeva/Shutterstock; Page 79 right center: Poznyakov/Shutterstock; Page 79 bottom right: Image Point Fr/Shutterstock; Page 80 top left: Bonita R. Cheshier/Shutterstock; Page 85 center right: Pearson Education, Inc.; Page 85 bottom right: Karin Hildebrand Lau/Shutterstock; Page 87 bottom left: Jerry Mason/Science Source; Page 87 bottom center left: Andrew Lambert/Science Source; Page 87 bottom center right: Andrew Lambert/Science Source; Page 87 bottom right: Andrew Lambert/Science Source; Page 88 top left: Michael Smith/Getty Images; Page 91 bottom right: Segre Collection/AIP/Science Source; Page 93 center right: Stephen Dunn/Getty Images; Page 93 center left: REUTERS/Tim Sharp; **Chapter 3** Page 115 top right: Popova Olga/Fotolia; Page 115 bottom left: Charles D. Winters/Science Source; Page 115 bottom right: Richard Megna/Fundamental Photographs; Page 129 top left: Lester V. Bergman/Corbis; Page 129 top 2nd image: Charles D. Winters/Science Source; Page 129 top third image: Joe Belanger/Alamy; Page 129 top fourth image: David J. Green/Alamy; Page 129 top fifth image: Studiomode/Alamy; Page 129 top sixth image: Jeff J Daly/Alamy; Page 129 top seventh image: Harry Taylor/Dorling Kindersley, Ltd.; Page 129 top 8th image: Richard Megna/Fundamental Photographs; Page 129 top right: Steve Gorton/Dorling Kindersley, Ltd.; Page 129 center right: Charles D. Winters/Science Source; Page 129 bottom right: Perennou Nuridsany/Science Source; Page 146 center left: Science Photos/Alamy; Page 146 center second: Richard Megna/Fundamental Photographs; Page 146 center third: Amana Images/Alamy; Page 146 center fourth: Jeff J Daly/Alamy; Page 146 center fifth: Charles D. Winters/Science Source; Page 146 center sixth: Steve Gorton/Dorling Kindersley, Ltd.; Page 146 center seventh: Charles D. Winters/Science Source; Page 146 center eighth: Ted Kinsman/Science Source; Page 146 bottom right: Manamana/Shutterstock; Page 146 right second bottom: Harry Taylor/Dorling Kindersley, Ltd.; Page 146 top right: Charles D. Winters/Science Source; Page 146 top right: Patrizio Semproni/Dorling Kindersley, Ltd.; **Chapter 4** Page 160 center: Malerapaso/iStock/Getty Images; Page 161 top left: Madlen/Shutterstock; Page 161 top right: Artjazz/Shutterstock; Page 161 bottom left: Richard Megna/Fundamental Photographs; Page 161 bottom center: Charles Falco/Science Source; Page 161 bottom right: Charles D. Winters/Science Source; Page 168 top left: Richard Megna/Fundamental Photographs; Page 168 bottom left: Richard Megna/Fundamental Photographs; Page 173 right center: Pearson Education, Inc.; Page 174 far left: Richard Megna/Fundamental Photographs; Page 183 center left: Richard Megna/Fundamental Photographs; Page 181 right center: NASA; Page 183 bottom right: Richard Megna/Fundamental Photographs; Page 191 right center: Sinelev/Shutterstock; **Chapter 5** Page 204 background image: Vaclav Volrab/Shutterstock; Page 224 left bottom: Pearson Education, Inc.; Page 224 bottom center: Pearson Education, Inc.; Page 224 bottom right: Pearson Education, Inc.; Page 225 right center: Pearson Education, Inc.; Page 226 top left: Pearson Education, Inc.; Page 238 top left: Kip Peticolas/Fundamental Photographs; Page 238 left center: Richard Megna/Fundamental Photographs; **Chapter 6** Page 276 center left: Richard Megna/Fundamental Photographs; **Chapter 7** Page 289 bottom right: Siede Preis/Getty Images; Page 289 bottom right: Michael Dalton/Photo Researchers, Inc.; Page 307 bottom right: Andrew Lambert/Science Source; Page 308 top left: Richard Megna/Fundamental Photographs; Page 308 top center: Richard Megna/Fundamental Photographs; Page 308 top right: Richard Megna/Fundamental Photographs; Page 308 bottom left: Richard Megna/Fundamental Photographs; Page 312 top left: Richard Megna/Fundamental Photographs; Page 312 top right: Richard Megna/Fundamental Photographs; Page 312 center right: Zoom Zoom/Getty Images; **Chapter 8** Page 319 bottom right: Javier Impelluso/Shutterstock; Page 329 top left: Richard Megna/Fundamental Photographs; Page 329 top center: Richard Megna/Fundamental Photographs; Page 329 top right: Richard Megna/Fundamental Photographs; Page 330 top left: Richard Megna/Fundamental Photographs; Page 331 center right: Stephanie Weiler/Corbis; Page 332 center

left: Dorling Kindersley, Ltd.; Page 333 center left: Richard Megna/Fundamental Photographs; Page 338 center left: Leonori/Shutterstock; Page 338 bottom right: Richard Megna/Fundamental Photographs; Page 339 top right: Richard Megna/Fundamental Photographs; Page 341 center left: Richard Megna/Fundamental Photographs; Page 344 bottom left: Richard Megna/Fundamental Photographs; Page 344 bottom center: Richard Megna/Fundamental Photographs; Page 344 bottom right: Richard Megna/Fundamental Photographs; Page 346 top left: Chip Clark/Fundamental Photographs; Page 346 bottom center: Richard Megna/Fundamental Photographs; Page 348 top left: Pearson Education, Inc.; Page 348 top right: Charles D. Winters/Science Source; Page 348 bottom left: Richard Megna/Fundamental Photographs; Page 348 bottom right: Richard Megna/Fundamental Photographs; Page 354 bottom left: Richard Megna/Fundamental Photographs; Page 354 bottom center: Richard Megna/Fundamental Photographs; Page 354 bottom right: Richard Megna/Fundamental Photographs; Page 255 right center: Chris Cheadle/Getty Images; **Chapter 9** Page 369 bottom left: Pearson Education; Page 369 bottom center: Page 374 bottom left: Palette7/Shutterstock; Page 376 right center: Page 382 bottom center: Pearson Education, Inc.; Page 382 bottom right: Stan Fellerman/Corbis; Page 396 bottom right: Richard Megna/Fundamental Photographs; Page 409 bottom right: Md8speed/Shutterstock; **Chapter 10** Page 423 right center: Wjarek/Fotolia; Page 426 bottom left: Michael Dalton/Fundamental Photographs; Page 458 bottom left: Pearson Education, Inc.; **Chapter 11** Page 462 center: NASA; Page 464 top left: Physics Central; Page 471 bottom center: Richard Megna/Fundamental Photographs; Page 476 top left: Doug/Getty Images; Page 476 bottom left: Andrei Kuzmik/Shutterstock; Page 477 top right: NASA; Page 477 bottom right: Iris Sample Processing; Page 478 top left: Richard Megna/Fundamental Photographs; Page 478 top center: Richard Megna/Fundamental Photographs; Page 479: Maridav/Fotolia; Page 483 bottom center: Michael Dalton/Fundamental Photographs; Page 487 left: Royal Society of Chemistry; Page 487 center left: Royal Society of Chemistry; Page 487 center right: Royal Society of Chemistry; Page 487 right: Royal Society of Chemistry; Page 488 top right: Reika/Shutterstock; Page 490 center left: Pearson Education, Inc.; Page 490 top center: DK Images; Page 490 top right: Can Balcioglu/Shutterstock; Page 494 bottom left: NG Images/Alamy Stock Photo; Page 495 center right: Pearson Education, Inc.; Page 499 center left: Daniel Taeger/Shutterstock; Page 499 center right: Dorling Kindersley, Ltd.; Page 500 top left: Nivaldo J. Tro; **Chapter 12** Page 485 12-00-01 Ted Kinsman/Science Source; Page 507 bottom right: OMIKRON/Science Source; Page 516 bottom left: Volodymyr Goynyk/Shutterstock; Page 516 bottom center left: Andrew Syred/Fcience Source; Page 516 bottom center right: Sashkin/Shutterstock; Page 516 bottom right: Mirka Moksha/Shutterstock; Page 518 top left: Mariusz Szczygiel/Fotolia; Page 518 bottom left: Charles D. Winters/Science Source; Page 518 bottom right: Baris Muratoglu/Getty Images; Page 521 top left: Sandatlas/Shutterstock; Page 521 top right: Tim Parmenter/The Natural History Museum, London/Dorling Kindersley,Ltd; Page 522 center left: Lijuan Guo/Fotolia; Page 523 bottom right: Isifa Image Service Sro/Rex/Newscom; Page 524 top left: Jmalov/iStock/Getty Images; Page 524 left center: Richard Megna/Fundamental Photographs; Page 524 left center: Nikada/iStock/Getty Images; Page 524 left bottom: Johnny Franzen/Getty Images; Page 525 top right: Luisa Leal Photography/Shutterstock; Page 528 center: Jwblinn/Shutterstock; **Chapter 13** Page 538 whole page: Masonjar/Shutterstock; Page 540 top left: Biology Pics/Science Source; Page 540 bottom left: Charles D Winters/Getty Images; Page 549 top left: Richard Megna/Fundamental Photographs; Page 549 top center: Richard Megna/Fundamental Photographs; Page 549 top right: Richard Megna/Fundamental Photographs; Page 550 top left: Richard Megna/Fundamental Photographs; Page 550 center left: Pearson Education, Inc.; Page 558 top left: Peter Gudella/Shutterstock; Page 564 top left: Avantgarde/Fotolia; Page 571 bottom left: Pearson Education, Inc.; Page 571 bottom center: Pearson Education, Inc.; Page 571 bottom right: Pearson Education, Inc.; Page 572 top left: Rubber Ball/Alamy; Page 572 top right: Dtimiraos/iStock/Getty; **Chapter 14** Page 620 left center: NASA; Page 621 top left: NASA; Page 621 top center: NASA; **Chapter 15** Page 640 top left: Martin McCarthy/E+/Getty Images; Page 671 top left: Richard Megna/Fundamental Photographs; Page 671 top right: Richard Megna/Fundamental Photographs; **Chapter 16** Page 687 top right: Karandaev/Fotolia; Page 687 center left: Leonori/Shutterstock; Page 687 center right: Mitch Hrdlicka/Photodisc/Getty Images; Page 688 top left: Pearson Education, Inc.; **Chapter 17** Page 742 top left: Richard Megna/Fundamental Photographs; Page 742 top center: Richard Megna/Fundamental Photographs; Page 742 top right: Richard Megna/Fundamental Photographs; Page 755 bottom left: Richard Megna/Fundamental Photographs; Page 755 bottom center: Richard Megna/Fundamental Photographs; Page 755 bottom right: Richard Megna/Fundamental Photographs; Page 768 top right: Pearson Education, Inc.; Page 769 top right: Pearson Education, Inc.; Page 774 left center: National Park Service(Nps.gov); Page 775 right center: Richard Megna/Fundamental Photographs; Page 776 top left: Charles D. Winters/Science Source; Page 776 top center: Charles D. Winters/Science Source; Page 781 left center: Richard Megna/Fundamental Photographs; Page 781 left bottom: Richard Megna/Fundamental Photographs; Page 783 top left: Richard Megna/Fundamental Photographs; Page 783 bottom left: Richard Megna/Fundamental Photographs; Page 783 center right: Richard Megna/Fundamental Photographs; **Chapter 18** Page 798 top left: Eryrie/Alamy Stock Photo; Page 798 left center: Motoring Picture Library/Alamy Stock Photo; Page 798 left bottom: Shubroto Chattopadhyay/Spirit/Corbis; Page 799 center left: BlackJack3D/E+/Getty Images;

Page 799 center right: www.sandatlas.org/Shutterstock; Page 799 bottom center: Paradoxdes/Fotolia; Page 800 top center: Richard Megna/Fundamental Photographs; Page 800 bottom left: Kocur, Johan; Page 803 bottom right: Svetlana Lukienko/Shutterstock; Page 805 top left: Jan Will/Fotolia; Page 826 center left: Ryan McVay/Photodisc/Getty Images; **Chapter 19** Page 850 top left: Richard Megna/Fundamental Photographs; Page 850 top right: Richard Megna/Fundamental Photographs; Page 851 bottom right: Alejandro Díaz Díez/AGE Fotostock America Inc.; Page 861 top right: Richard Megna/Fundamental Photographs; Page 870 top left: Dave King/Courtesy of Duracell Ltd/Dorling Kindersley, Ltd; Page 871 right center: Paul Mogford/Alamy Stock Photo; Page 876 top left: Charles D. Winters/Science Source; Page 879 bottom right: StockPhotosArt/Shutterstock; Page 880 top left: Donovan Reese/The Image Bank/Getty Images; Page 880 bottom left: Alan Pappe/ Stockbyte/Getty Images; Page 881 top right: Steve Goodwin/iStock/Getty Images Plus; Page 881 center: Pearson Education, Inc.; **Chapter 20** Page 894 left center: iStock/Getty Images Plus; Page 894 bottom center: Science Source; Page 895 top right: Stringer/Getty Images; Page 895 bottom right: Klaus Guldbrandsen/Science Source; Page 903 right center: United States Air Force; Page 903 bottom right: Hank Morgan/Science Source; Page 907 right center: Baz Ratner/Thomson Reuters (Markets) LLC; Page 907 bottom right: Ken Babione/iStock/Getty Images Plus; Page 908 top left; Page 911 top right: American Institute of Physics/Emilio Segre Visual Archives; Page 912 top left: Stocktrek/Photodisc/Getty Images; Page 912 center page: Franklin D. Roosevelt Library; Page 913 top center: Elena Aliaga/iStock/Getty Images Plus; Page 914 top left: Kyodo/Associated

Press; Page 917 bottom center: General Atomics MS 15-124; Page 918 top left: Fox Photos/Stringer/Hulton Archive/Getty Images; Page 918 bottom left: David Parker/Science Source; Page 919 top right: Fermilab/Science Source; Page 923 top center: BSIP/UiG Via Getty Images; Page 923 bottom right: D. Silbersweig/Science Source; Page 924 top center: Centre Oscar Lambret/Science Source; Page 924 bottom left: Cordelia Molloy/Science Source; Page 932 top right: Craig Ellenwood/Alamy Stock Photo; **Chapter 21** Page 936 top left: Pearson Education, Inc.; Page 949 top right: Chad Koski/iStock / Getty Images Plus; Page 950 bottom left: John Casey/Fotolia; Page 955 top right: Pearson Education, Inc.; Page 964 bottom center: Lyudmila Suvorova/Shutterstock; Page 965 top center: Andreas Von Einsiedel/Dorling Kindersley Limited; Page 966 bottom center: Olga Shelego/iStock/Getty Images Plus; Page 967 top left: Yasonya/Shutterstock; **Chapter 22** Page 986 top left: Tim Parmenter/Dorling Kindersley Limited; Page 986 lower top left: Tim Parmenter/Dorling Kindersley Limited; Page 986 center left: Harry Taylor/Dorling Kindersley Limited; Page 986 center: Harry Taylor/Dorling Kindersley Limited; Page 986 center right: Asya Babushkina/Shutterstock; Page 996 center left: Richard Megna/Fundamental Photographs; Page 996 center right: Richard Megna/Fundamental Photographs; Page 1001 center right: Richard Megna/Fundamental Photographs; Page 1001 center right: Richard Megna/Fundamental Photographs; Page 1002 top left: Richard Megna/Fundamental Photographs; Page 1005 bottom right: Richard Megna/Fundamental Photographs;

Text Credits

Chapter E Page 3: Albert Einstein, “Physik und Realität” (Physics and Reality), Journal of the Franklin Institute, March 1936, Vol 221, No. 3, p. 349. **Chapter 1** Page 35: Roger Joseph Boscovich, *Philosophiae Naturalis Theoria* (A theory of natural philosophy), Section 1.5, 1763, English translation by James Mark Child, 1922, Open Court Publishing, Chicago and London; page 41: Diogenes Laertius IX, *Lives of Eminent Philosophers*, Vol. 2 (p.453), translated by R. D. Hicks, London: Loeb Classical Library. Copyright © 1925; page 41: Thomas Kuhn, *The Structure of Scientific Revolutions*, Chicago: University of Chicago Press, 1962; page 46: J. J. Thomson, “Cathode Rays,” *Philosophical Magazine*, 44, 293 (1897); page 49: Samuel Glasstone, *Sourcebook on Atomic Energy*, 2nd edition. Princeton, NJ: Van Nostrand, 1958, p. 93. **Chapter 2** Page 75: Heisenberg, *Physics and Beyond: Encounters and Conversations* (1971), New York: Harper Row, p. 75. **Chapter 3** Page 113: D. Mendeleef, *The Principles of Chemistry*, Vol. 1; translation from the Russian by George Kamensky, New York: Longmans, Green and Co., 1905, p. 240. **Chapter 4** Page 159: Gilbert N. Lewis (1875–1946), in a letter to Linus Pauling in 1939. **Chapter 5** Page 205: George Gore, *The Art of Scientific Discovery or the General Conditions and Methods of Research in Physics and Chemistry*, 1878, London: Longmans, Green and Co. **Chapter 6** Page 251: In Barbara Marinacci (ed.), *Linus Pauling in His Own Words: Selections from his Writings, Speeches, and Interviews*. New York: The Linus Pauling Institute, 1995, p. 110. **Chapter 7** Page 287: In Barbara Marinacci (ed.), *Linus Pauling in His Own Words: Selections from his Writings, Speeches, and Interviews*. New York: The Linus Pauling Institute, 1995, p. 43. **Chapter 8** Page 319: Sir Karl Popper, edited by W. W. Bartley, *The Open Universe : An Argument for Indeterminism* (1992), London: Routledge, p. 44. **Chapter 9** Page 367: *The Feynman Lectures on Physics*, Vol. I, New Millenium Edition, New York: Basic Books, p. 4–1. Copyright: 1963 by California Institute of Technology. **Chapter 10** Page 415: James Clerk Maxwell, *The Scientific Papers of James Clerk*

Maxwell: Volume II, Cambridge University Press, 2011, p. 48. **Chapter 11** Page 463: Chemistry Imagined, Roald Hoffmann and Vivian Torrence, Smithsonian Institution Press, Washington, 1993. **Chapter 12** Page 505: Andre K. Geim, “Random Walk to Graphene,” Nobel Lecture, Dec. 8, 2010, pp. 84–85. **Chapter 13** Page 539: François-Marie Raoult, originally published in *Comptes Rendus* 104, 1430–3 (May 23, 1887), as translated and published by Henry M. Leicester & Herbert S. Klickstein, *A Source Book in Chemistry, 1400–1900* (Cambridge, MA: Harvard University Press, 1952), p. 475. **Chapter 14** Page 585: Sir Cyril Hinshelwood-Nobel Lecture: “Chemical Kinetics in the Past Few Decades,” Nobelprize.org. Nobel Media AB 2014. Web. 22 Mar 2016. http://www.nobelprize.org/nobel_prizes/chemistry/laureates/1956/hinshelwood-lecture.html. **Chapter 15** Page 639: Alfred J. Lotka, *Elements of Mathematical Biology*, 1956, p. 281. **Chapter 16** Page 685: Gilbert Newton Lewis, *Valence and the Structure of Atoms and Molecules*, American Chemical Society Monograph Series, New York: The Chemical Catalog Company, 1923, p. 138. **Chapter 17** Page 739: In Joseph William Mellor, *Mellor’s Modern Inorganic Chemistry*, Longmans, Green & Company, London, 1967, p. 177. **Chapter 18** Page 797: Sir Arthur Stanley Eddington, *The Nature of the Physical World*, New York: MacMillan, 1929, p. 74. **Chapter 19** Page 845: *Le Opere*, Vol. 1, 149. In Giuliano Pancaldi, *Volta: Science and Culture in the Age of Enlightenment* (2005), 190. **Chapter 20** Page 893: Eve Curie, *Madame Curie: A Biography*, Doubleday, 1937, p. 341. **Chapter 21** Page 935: In Lawrence R. Hafstad, “Atomic Power for Aircraft,” *Bulletin of the Atomic Scientists* (Nov 1949), p. 310, citing Friedrich Wohler’s letter to J. J. Berzelius (28 Jan 1835). Date of letter identified in Alan L. Mackay, *A Dictionary of Scientific Quotations* (1991), 267. **Chapter 22** Page 985: In George B. Kauffman, Alfred Werner: *Founder of Coordination Chemistry*, 1966, Springer-Verlag, Berlin, Germany, p. iii.

INDEX

A

A. *See* frequency factor; mass number

A (ampere), **851**

absolute concentration, **752–753**

absolute scale. *See* Kelvin scale

absolute zero, **422, 815–816**

absorption, **899, 986**

absorption spectra, **88, 1002**

accuracy, **9–10**

acetaldehyde (ethanal), **265, 965**

acetic acid

in buffers, 741

formula, 686, 694

naming, 340

pH of, 701, 715

and potassium hydroxide, 343

in solution, 329, 715

sources of, 687, 962

structure, 192

uses, 966, 967

acetone

and carbon disulfide, 561–563

dipole–dipole forces, 470

model and uses, 964

vaporization of, 479

acetonitrile, **472, 606–607**

acetylaldehyde, **963**

acetylene (ethyne)

formula and models of, 165, 949

hybridization of, 261–262

triple bond in, 192, 936

uses, 950

acetylsalicylic acid, **180, 967**

acid(s). *See also* specific acids

acid ionization constant, 693–696

amino, 969

Arrhenius, 338, 688, 689

binary, 339, 691–692

Brønsted–Lowry, 689–691, 718

buffer effectiveness and amounts of, 752

carboxylic, 687, 966–969

concentrated, 694

concentrations of, in buffers, 752–753

conjugate, 690–691, 717, 750–751

defined, 329, 688–691

dilute, 694

dilution of, 322

diprotic, 338, 693, 723–724, 766

hydronium ion concentration of, 700–709

ions and salts as, 717–720

Lewis, 725–726

molecular structure of, 691–693

monoprotic, 693, 695

nature of, 686–687

oxyacids, 340, 692

percent ionization of, 706–707

pH of, 700–709

polyprotic. *See* polyprotic acids

properties of, 338–339

and rusting, 879, 880

strength of, 691–696

strong. *See* strong acid(s)

triprotic, 694

weak. *See* weak acid(s)

acid anhydride, **967**

acid–base chemistry, **685–729**

acid strength, 691–696

and autoionization of water, 696–697

in Batman comic book series, 684–686

definitions of acids and bases, 688–691

hydronium ion concentration/pH of acids,
700–709

hydroxide ion concentration/pH of bases,
710–713

ions and salts, 713–720

Lewis acids and bases, 725–726

nature of acids and bases, 686–688

pH scale, 698–699

pOH scale, 699–700

polyprotic acids, 720–724

acid–base reactions, **337–345**

binary acids in, 339

hydrochloric acid and sodium hydroxide,
340–341

and properties of acids/bases, 338–339

titrations, 343–345

acid–base titrations. *See* titrations

acidic cations, **717–718**

acidic solutions

balancing redox reactions in, 847–848

defined, 696, 697

hydronium ion concentration in, 700–709

pH of, 698, 700–709

salt solutions as, 718–720

solubility of ionic compounds in, 774

solubility of metal hydroxides in, 782, 783

acid ionization constant (K_a), **693–696, 721**

acidosis, **740**

acid rain, **820**

activated complex, **607**

activation energy (E_a)

in Arrhenius equation, 607

from Arrhenius plots, 608–610

defined, 587, 606

active nuclear charge, **133**

active site, enzyme, **622**

activity series of metals, **354–356**

actual yield, **300**

acute radiation damage, **920**

addition

of chemical equations, 646

vector, 237–238

addition polymers, **527–528**

addition reactions, **954–956**

adhesive forces, **477–478**

adipic acid, **528**

Adventure Thru Inner Space (ride), **34–36**

aerosols, **426**

age, measuring, **907–910**

air, **431, 433, 443**

alchemists, **918**

alcohols, **961–963**

and aldehydes/ketones, 965

and carboxylic acids, 967

solubility of, 544

aldehydes, **963–965**

aliphatic hydrocarbons, **937–938**

aliquots, **592**

alkali metal chlorides, **400**

alkali metals, **130, 307–309**

alkaline batteries, **870**

alkaline earth metals, **130**

alkaloids, **687**

alkanes, **937, 944–948**

alkynes and alkenes vs., 938

naming, 945–948

reactions of, 954

n-alkanes, boiling points of, **468–469, 944**

alkenes, **937, 948–953**

alkynes and alkanes vs., 938

geometric isomerism in, 952–953

naming, 950–952

reactions of, 954–956

unsymmetrical, 955

alkyl groups, **946**

alkynes, **937, 948, 950–952**

alkanes and alkenes vs., 938

naming, 950–952

reactions of, 954–955

allotropes, **521, 816, 817**

alpha (α) decay, **895–897, 900**

alpha (α) particles, **48, 899–897**

altitude, **370–371, 417, 483**

alumina, **524**

aluminosilicates, **523**

aluminum, **37**

aluminum oxide vs., 524

density, 14, 60–61, 112–113, 513–514

electron configuration, 123

and iron(III) oxide, 396

isotopes of, 52

molar mass, 58–59

- aluminum (*cont.*)
 and oxygen, 169
 sacrificial electrodes of, 881
 and water, 376–377
- aluminum-27 isotope, **918**
- aluminum acetate, **719**
- aluminum ions, **131, 725, 782–783**
- aluminum nitrate, **719**
- aluminum oxide, **524, 880, 985**
- amines, **711, 968–969**
- amino acids, **969**
- ammonia, **177**
 and boron trifluoride, 725
 and cobalt(III) compounds, 990
 formation of, 301, 303, 446, 647, 670
 formula and models, 165
 hybrid orbitals, 256–257
 with nitrogen and hydrogen, 667–669
 nitrogen-to-hydrogen mass ratio of, 43
 and silver, 778–779, 990
 and silver chloride, 780–781
 as weak base, 711
- ammonium bromide, **719**
- ammonium nitrate, **173, 544–545, 547**
- ammonium nitrite, **719**
- ammonium salts, **969**
- amorphous solids, **465**
- ampere (A), **851**
- amphotericity, **689, 696, 782**
- amphoteric metal hydroxides, **782–783**
- amplitude, **77**
- amu (atomic mass unit), **50**
- angular momentum quantum number (*l*), **94**
- aniline, **957**
- anion(s)
 defined, 54
 from electrolysis, 875
 and ionic bonds, 161
 ionic radii of, 139
 monoatomic, 171
 neutral, 714, 715
 oxyanions, 174
 as weak bases, 714–717
 in weak diprotic acid solution, 723–724
- anionic complex ions, **994**
- anodes, **852, 855**
- anodic regions, **880**
- Antarctica, ozone hole over, **620, 621**
- antibodies, radioactively labeled, **892, 894**
- antibonding orbitals, **268–270**
- antifluorite structure, **520**
- antifreeze, **564, 565**
 glucose as, 538–540
 toxicity of, 739–740
- antimony, **129**
- antiparticles, **898**
- AOs. *See* atomic orbitals
- appendicitis, diagnosis of, **892–894**
- approximations, **661–664, 701**. *See also*
x is *small* approximation
- aqueous ionic equilibrium, **739–786**
 buffers, 740–754
 complex ion equilibria, 778–783
 in precipitation reactions, 775–778
 solubility-product constant, 769–775
 titrations, 755–769
 and toxicity of antifreeze, 739–740
- aqueous reactions, **331–356**
 acid–base, 337–345
 gas-evolution, 346–347
 oxidation–reduction, 347–356
 precipitation, 331–336
 representing, 336–337
- aqueous solutions
 defined, 320, 540
 electrolysis in, 875–877
 and heats of hydration, 546–548
 parts per million for, 554
 standard entropies of, 818–819
 types of, 326–329
- arbitrary elements, in science, **41**
- area, pressure and, **415, 417**
- argon, **52, 130, 518**
 atomic radius, 416
 electron configuration, 127
 in Geiger–Müller counter, 903
 ideal vs. real behavior, 447
 ionization energies, 144
 and neon, 541
 partial pressure, 434–435
 standard entropy, 818
- argon-40 isotope, **910**
- Aristotle, **39, 41**
- aromatic compounds, **958–959**
- aromatic hydrocarbons, **937, 956–959**
- Arrhenius, Svante, **606, 688**
- Arrhenius definition (of acids and bases), **338, 688, 689**
- Arrhenius equation, **606–611**
 activation energy in, 607
 and Arrhenius plots, 608–610
 exponential factor in, 607–608
 frequency factor in, 607
 two-point form, 610
- Arrhenius plots, **608–610**
- arsenic, **129, 262**
- arsenic pentafluoride, **219, 262**
- ascorbic acid, **722, 724**
- Aspidin, Joseph, **524**
- aspirin, **180, 187, 967**
- atmosphere (atm), **393, 418**
- atom(s), **35–65**. *See also* quantum-mechanical
 model of atom
 atomic radii, 131–135
 average mass, 54–57
 as building blocks of matter, 41
 and classification of matter, 37–39
 defined, 36
 discovery of electrons, 45–47
 modern atomic theory, 41–45
 and moles, 57–61
 orientation factors for reactions of, 612
 origins of, 62
 and scientific approach to knowledge, 39–41
 shape of, 103
 structure of, 48–50
 and structure/properties of matter, 35–37
 subatomic particles, 50–54
- atomic bomb, **911–912**
- atomic mass, **54–57, 179**
- atomic mass unit (amu), **50**
- atomic number (*Z*), **50, 51, 115, 132**
- atomic orbitals (AOs)
 completely filled, 253
 defined, 93
 degenerate, 118
 delocalization of, 525
d orbitals. *See d* orbitals
 filling of, 117–124
f orbitals, 102–103, 122
 hybridization of, 252, 254–266, 1000
 of Lewis acids, 725
 linear combinations of, 267–270
 for multi-electron atoms, 121–124
 overlap of, 252–254
 and periodic table, 125–126
 phase of, 103
p orbitals, 100, 102, 255–263, 273
 shapes of, 99–103
s orbitals, 99–101, 255–263, 273
 sp^2 hybridization, 257–260
 sp^3d^2 hybridization, 263
 sp^3d hybridization, 262
 sp^3 hybridization, 255–257
 sp hybridization, 261–262
- atomic radii, **131–135, 512, 987–988**
- atomic solids, **518**
- atomic spectroscopy, **85–88, 96–98**
- atomic theory, **40–45**
- atomic weight. *See* atomic mass
- atomos, **41**
- attractive force, **901**
- aufbau principle, **121**
- autoionization of water, **696–697**
- average bond energy, **221**
- average bond length, **222**
- average kinetic energy, **416, 440**
- average rate of reaction, **589–590**
- Avogadro, Amedeo, **57, 424**
- Avogadro's law, **424–425**
- Avogadro's number, **57**. *See also* mole(s)
- axial positions, **225**

B

- Bacon, Francis, **41**
- baking soda, **170, 319**. *See also* sodium
 bicarbonate
- balancing equations
 general procedure, 291–294
 half-reaction method, 846–848
- ball-and-stick molecular models, **164**
- band gap, **526**
- band theory, **525**
- bar (unit), **393**
- barium, **85, 87, 88, 130, 910**
- barium chloride hexahydrate, **174**
- barometers, **418**
- base(s). *See also* specific bases
 Arrhenius, 688, 689
 Brønsted–Lowry, 689–691
 buffer effectiveness and amounts of, 752

- conjugate, 690–691, 740–741, 752–753
- and conjugate acids, 690–691, 714, 750–751
- defined, 688–691
- hydroxide ion concentration of, 710–713
- ions and salts as, 713–720
- Lewis, 725
- nature of, 687–688
- pH of, 710–713
- properties, 338–339
- strong. *See* strong base(s)
- weak. *See* weak base(s)
- base ionization constant (K_b), **710**
- basic anions, **714–717**
- basic solutions
 - balancing redox reactions in, 848–849
 - defined, 697
 - metal hydroxides in, 782, 783
 - pH of, 698, 711–713
 - salt solutions as, 718–720
- Batman comic book, **684–686**
- battery(-ies), **870–872**
 - alkaline, 870
 - dry-cell, 870
 - energy loss in, 798, 825–826
 - flow of electrical charge in, 844–846
 - fuel cells vs., 872
 - irreversible reactions in, 825
 - lead–acid storage, 870–871
 - lithium ion, 871
 - nickel–cadmium, 871
 - nickel–metal hydride, 871
 - rechargeable, 871–872
 - redox reactions in, 347
- Baumgartner, Felix, **414–416**
- Becquerel, Antoine-Henri, **48, 894–895**
- bent geometry, **36, 228**
- benzaldehyde, **964**
- benzene
 - formula and models, 165
 - molecular orbital model, 278
 - as molecular solid, 517
 - structure, 956–957
 - surface tension, 477
- benzoic acid, **745**
- berkelium, **52**
- beryllium
 - effective nuclear charge, 134
 - incomplete octet formation, 218, 223
 - isotopes, 52
 - Lewis structure, 165
- beryllium aluminum silicate, **985**
- beta (β) decay, **895, 897–898, 899, 900**
- beta minus (β^-) decay, **898**
- beta (β) particles, **897–898**
- beta plus (β^+) decay, **898**
- bicarbonate ions, **713–714, 740**
- bidentate ligands, **990**
- Big Bang Theory, **62**
- bimolecular steps, **613–614**
- binary acids, **339, 691–692**
- binary ionic compounds, **171–172**
- binding energy, **81–82**
- biological effectiveness factor (RBE), **921**
- biological systems, **810, 824**
- biomolecules, **1005–1007**
- bismuth, **901, 904**
- blood, buffers in, **738, 740**
- blood drawing, **477**
- Blue Ribbon Commission on America's Nuclear Future, **914**
- body-centered cubic unit cell, **511–512**
- Bohr, Niels, **75, 86–87**
- Bohr model, **86–88**
- boiling, **289**. *See also* vaporization (evaporation)
- boiling point
 - of *n*-alkanes, 468–469, 944
 - and dipole moment, 471
 - and dispersion force, 468–469
 - and intermolecular forces, 474
 - of main-group hydrides, 474
 - normal, 483
 - and temperature, 483–486
 - of water, 494–495
- boiling point elevation, **563–566**
- Boltzmann, Ludwig, **800, 815, 816**
- Boltzmann constant, **800**
- bomb calorimeter, **380–381**
- bombs
 - atomic, 911–912
 - of bomb calorimeter, 380
 - hydrogen, 917
- bond(s). *See also* covalent bonds
 - in compounds, 160–162
 - defined, 160
 - directional, 177
 - double. *See* double bond(s)
 - energy from breaking, 389–391
 - hydrogen, 472–474
 - ionic, 161, 162, 166–168
 - metallic, 518
 - nondirectional, 177
 - π , 258–259
 - polarity of, 206–210, 691, 692
 - σ , 258–259
 - single, 175–176, 259–260
 - triple, 176, 261–262, 936–937
- bond dissociation energy. *See* bond energies
- bond energies, **220–221, 255, 389–392**
- bond enthalpy. *See* bond energies
- bonding, **205–242, 251–280**. *See also*
 - ionic bonding
 - and bond energies, 220–221
 - and bond length, 222
 - in coordination compounds, 999–1005
 - covalent, 161, 175–177
 - and electron delocalization, 266–277
 - electronegativity and bond polarity, 206–210
 - energy required for, 389–391
 - exceptions to octet rule, 217–220
 - and formal charge, 215–217
 - hybridization and bonding schemes, 263–266
 - and hybridization of atomic orbitals, 254–266
 - hydrogen, 472–474, 495
 - and ionization energies, 144
 - Lewis theory, 210–220
 - magnetic property of liquid oxygen, 250–252
 - and molecular geometry, 223–235
 - molecular orbital theory, 266–278
 - and molecular shape/polarity, 235–239
 - in morphine, 204–206
 - orbital overlap in, 252–254
 - in polyatomic molecules, 277–278
 - resonance in, 212–214
 - valence bond theory, 252–266
 - VSEPR theory, 223–235
- bonding atomic radius (covalent radius), **131**
- bonding electron pairs, **175, 227**
- bonding orbitals, **267–270, 276**
- bond length, **222, 400**
- bond order, **269–270**
- bond strength, **691–692**
- bone scans, **923**
- Born–Haber cycle, **168, 398–400**
- boron, **165, 218–219**
- boron nitride, **524**
- boron trifluoride, **725**
- borosilicate glass, **525**
- Boscovich, Roger Joseph, **35**
- Boyle, Robert, **41, 420**
- Boyle's law, **420–422**
 - and Charles's law, 424
 - and ideal gas law, 425, 426
 - and vapor pressure, 482
- Bragg's law, **507, 508**
- bridging hydrogens, **210**
- bristlecone pine trees, **907–908**
- bromate, **174**
- bromine
 - atomic radii, 131
 - and 1-butene, 956
 - electron configuration, 123
 - family of, 130
 - and fluorine, 308
 - and potassium, 309, 612
- bromine trifluoride, **265**
- bromobenzene, **957**
- 1-bromo-2-chlorobenzene, **958**
- bromoethane, **962**
- Brønsted–Lowry definition (of acids and bases), **689–691, 718**
- buckminsterfullerene, **522**
- buckyballs, **522**
- buffer capacity, **754**
- buffer range, **753–754**
- buffers, **740–754**
 - action of, 748
 - bases and conjugate acids in, 750–751
 - in blood, 738, 740
 - characteristics, 740–741
 - effectiveness, 752–754
 - formation of, 741
 - Henderson–Hasselbalch equation for, 743–746
 - pH changes in buffer solutions, 746–750
 - pH of buffer solutions, 742–744
- burns, steam, **479**
- butanal, **964**
- butane
 - combustion of, 291–293, 382
 - isobutane vs., 938–939
- n*-butane, **944**
- butanedione, **188–189**
- 1-butanol, **961**

2-butanol, **965**
 2-butanone, **965**
 1-butene, **956**
cis-2-butene, **953**
trans-2-butene, **953**
 2-butene-1-thiol, **936**
 1-butyne, **950**

C

C (heat capacity), **374–376, 380**
 cadaverine, **969**
 cadmium, in batteries, **871**
 CaF₂ (fluorite) structure, **520**
 cal (calorie), **17**
 Cal (Calorie), **17**
 calcium
 absorption spectrometry, **88**
 and chelating agents, **1005**
 and chlorine, **167**
 emission spectra, **88**
 family of, **130**
 and oxygen, **169**
 and water, **846**
 calcium acetate, **718**
 calcium bromide, **171**
 calcium carbonate, **173, 774**
 calcium chloride, **319**
 calcium fluoride, **517**
 dissolution of, **769–770**
 relative solubility, **772–773**
 solubility-product constant, **775**
 in thermoluminescent dosimeters, **903**
 unit cell of, **520**
 calcium hydroxide, **777–778**
 calcium ions, **88, 777**
 calcium nitrate, **718**
 calcium oxide, **171**
 calcium sulfate hemihydrate, **174**
 calcium sulfide, **519**
 californium, **919**
 calorie (cal), **17**
 Calorie (Cal), **17**
 calorimetry
 constant-pressure, **385–387**
 constant-volume, **379–381, 387**
 defined, **380**
 cancer, **920, 923–924, 1007**
 capillary action, **477–478**
 carbon
 atomic mass, **50, 55**
 in carbon dioxide, **43, 44**
 chemical symbol, **52**
 and cobalt(III) oxide, **292–293**
 color code, **36**
 from combustion analysis, **189–191**
 combustion of, **307**
 electron configuration, **121**
 electronegativity, **216**
 hybridization in, **255, 256, 261**
 and hydrogen, **825**
 isotopes of, **53**
 Lewis structure of, **165**
 molar mass, **59**
 as network covalent atomic solid, **521–523**
 nuclear charge, **50**
 in organic chemistry, **191–192, 935**
 origin of, **62**
 and oxygen, **177, 371**
 properties, **936–937**
 standard entropy, **817**
 and sulfur, **351**
 carbon-12 isotope, **57**
 binding energy per nucleon, **915**
 collision of uranium-238 and, **919**
 molar mass, **58**
 and radiocarbon dating, **907**
 in valley of stability, **901**
 carbon-14 dating, **907–908**
 carbonate ions, **331**
 carbonates, solubility of, **774**
 carbon dioxide, **38**
 chemical formula, **163**
 from combustion, **295–297, 307, 953**
 decomposition of, **43, 371**
 from electricity generation, **913**
 formula mass of, **179**
 as greenhouse gas, **286, 288**
 molar mass, **179–180**
 from oxidation of carbon monoxide, **824**
 oxygen-to-carbon mass ratio, **44**
 phase diagram, **493, 494**
 polarity, **236**
 in rainwater, **774**
 real gas behavior of, **450**
 solubility, **550–552**
 supercritical, **487**
 and water, **650, 725, 1007**
 carbon disulfide, **517, 561–563**
 carbonic acid, **726, 740, 880**
 carbonic anhydrase, **1005, 1007**
 carbon monoxide
 in catalytic converters, **619**
 from electricity generation, **913**
 and ethanol in gasoline, **961**
 and nitrogen dioxide, **596–597, 610, 614–615**
 oxidation of, **824**
 oxygen-to-carbon mass ratio, **44**
 standard entropy, **818**
 carbon skeleton formula, **939**
 carbon tetrachloride, **814, 954**
 carbonyl group, **963, 965**
 carboxylic acids, **687, 966–969**
 carvone, **964**
 catalysis, **618–622**
 catalysts, **618–622, 955, 959**
 catalytic converters, **619–620**
 catenation of carbon, **936, 937**
 cathode rays, **45–46**
 cathode ray tubes, **45**
 cathodes, **852, 855**
 cathodic regions, **880**
 cation(s)
 defined, **54**
 from electrolysis, **875**
 and ionic bonds, **161**
 ionic radii of, **138**
 as Lewis acids, **726**
 of metals, **171–172, 717–718**
 as weak acids, **717–718**

cell diagrams, **852–853**
 cell emf. *See* cell potential (E_{cell})
 cell potential (E_{cell}), **861–869**
 and concentration, **865–869**
 in concentration cells, **869**
 defined, **851–852**
 and equilibrium constant/reaction quotient, **868**
 and free energy/equilibrium constant, **861–865**
 under nonstandard conditions, **866–868**
 Celsius scale (°C), **5–6**
 cement, **524**
 centimeter, **3**
 ceramics, **523–524**
 certainty of measurements, **8–9**
 cesium chloride, **519**
 CFCs. *See* chlorofluorocarbons
 CFT. *See* crystal field theory
 Chadwick, James, **49**
 chain reactions, **911**
 charge(s)
 active nuclear, **133**
 effective nuclear, **119, 133–134**
 electrical, **46–47, 50, 844–846**
 formal, **215–217**
 ionic, **349**
 and lattice energy, **400–401**
 metals with invariant, **170**
 in voltaic cells, **852**
 charged particles, configurations of, **162**
 charge-to-mass ratio, **46**
 Charles, J. A. C., **423**
 Charles's law
 described, **422–424**
 and ideal gas law, **425, 426**
 Check step (in problem solving), **20–21**
 chelate, **991**
 chelating agents, **991, 1005**
 chemical analysis, coordination compounds in, **1005**
 chemical bonds. *See* bond(s); bonding
 chemical changes, **289–290**
 chemical energy, **16, 368**
 chemical equations, **290–294**
 for acid–base reactions, **342–343**
 for aqueous reactions, **336–337**
 balancing, **291–294, 846–849**
 and equilibrium constants, **644–647**
 for gas-evolution reactions, **347**
 for precipitation reactions, **335**
 writing, **290–291**
 chemical equilibrium. *See* equilibrium
 chemical formula(s)
 and composition, **186**
 of compounds, **162–163, 186–191**
 conversion factors from, **184–185**
 experimental determination of, **186–191**
 of ionic compounds, **169**
 and Lewis structures, **210**
 and mass percent composition, **181**
 chemical kinetics. *See* reaction rate(s)
 chemical potential, **812**
 chemical properties, **289**
 chemical reactions. *See* reaction(s)
 chemical symbols, **52**
 chemistry, **36**

Chernobyl nuclear accident (1986), **913**

χ_a . *See* mole fraction

china (porcelain), **524**

chirality, **942, 998**

chlorate, **174**

chloride ions, **139, 520, 875**

chlorine

atomic mass, 54

atomic radii, 139

and calcium, 167

chemical symbol, 52

from electrolysis, 877

electron affinity, 144, 145

electron configuration, 126, 129

electronegativity, 692

and ethene, 954–955

family of, 130

and hydrogen, 208, 349

and iodine, 309

ionization energies, 141

and iron, 308

isotopes of, 52, 53

Lewis structure, 175

mass spectrum, 56

and methane, 390–391, 954

and potassium, 166–167

and sodium, 42, 208, 348

chlorite, **174**

chlorobenzene, **957, 959**

chloroethane, **955**

chloroethene, **528**

1-chloro-3-ethylbenzene, **958**

chlorofluorocarbons (CFCs), **181, 598, 618, 620**

chloroform, **954**

chloromethane, **954**

chlorophyll, **1005, 1007**

1-chloropropane, **955**

2-chloropropane, **955**

chlorous acid, **754**

chromium, **127–128, 171–172**

chromium(III) bromide, **171–172**

chromium(III) ions, **171–172**

Ci (curie), **920**

cinnamaldehyde, **191, 964**

cis isomers

of alkenes, 952–953

of coordination compounds, 996–997

properties of, 260

cisplatin, **1007**

cis-trans isomerism

in alkenes, 952–953

in coordination compounds, 996–997

and properties of compounds, 260

citric acid, **687, 966**

classical (term), **80**

Clausius–Clapeyron equation, **484–486**

clays, **523**

climate change, **286–288**

closest-packed structures, **514–516, 518**

club soda, **540, 552**

coal, **913**

cobalt(II) chloride, **174**

cobalt(III) coordination compounds, **990, 992**

cobalt(III) hexahydrate, **174**

cobalt(III) oxide, **292–293**

coefficients

in chemical equations, 291, 644, 646

in standard entropy change calculations, 819

coffee-cup calorimeters, **385–387**

cohesive forces, **477–478**

cold packs, chemical, **382**

colligative properties of solutions, **558–572**

boiling point elevation, 563–566

freezing point depression, 563–565

with medical uses, 571–572

osmotic pressure, 566–568

with strong electrolytes, 569–572

vapor pressure lowering, 558–563, 570–571

with volatile solutes, 560–563

collision frequency, **611**

collision model, **586–587, 611–612**

collisions

elastic and inelastic, 416

and pressure, 417–419

color(s)

and absorption of light, 78

complementary, 1001

of complex ions, 1001–1003

of rubies and emeralds, 984–986

of solutions with indicators, 767–769

coloring agents, **1005**

color wheel, **1001**

combustion analysis, **189–191**

combustion reactions (combustion), **290, 307**

in bomb calorimeters, 380–381

of butane, 291–293, 382

of ethanol, 307, 367–368, 382

and flaming ice demonstration, 367–368

of fossil fuels, 286–289, 295–297

of gasoline, 16, 18, 289, 377–378, 797, 824–825

of hydrocarbons, 953

of hydrogen, 307, 348

of methane, 300–301, 395

of natural gas, 290–291, 307, 369, 381

of octane, 286, 295–297, 348, 397–398

of petroleum, 296–297

of propane, 384–385, 810

of sucrose, 380–381

water in, 307, 384, 953

common ion effect, **742–743, 773–774**

common names, **170**

complementary color, **1001**

complementary properties, **91**

complete ionic equations, **336, 337**

completely filled orbitals, **253**

complex ion equilibria, **778–783**

and amphoteric metal hydroxides, 782–783

and formation constant, 779

and solubility, 780–782

complex ions, **990**

crystal field strength and color of,

1001–1003

defined, 778

formation of, 778–779

geometries, 992–993

hybridization schemes, 1000

naming, 993–994

composition of matter, **37–39, 368**

compounds, **159–195**. *See also* coordination compounds; ionic compounds

aromatic, 958–959

chemical bonds in, 160–162

chemical formulas of, 162–163, 186–191

composition of, 181–186

in composition of matter, 39

covalent, 211

covalent bonding in, 175–177

formula mass for, 179

insoluble, 329–331, 334, 540, 775

interhalogen, 308

ionic bonding in, 166–168

Lewis models, 164–166

Lewis structures, 210–211

mole concept for, 179–181

molecular, 162, 177–179, 210–211

molecular models, 164

nonpolar, 471

organic, 191–192, 216–217

polar, 471

properties of molecules vs., 159–160

pure, 393

soluble, 329–331, 540, 775

standard enthalpy of formation, 393

standard free energy of formation, 822

compressibility of gases, **38, 465**

concentrated acids, **694**

concentrated buffers, **752–753**

concentrated solutions, **320, 552**

concentration. *See also* equilibrium concentration

absolute, 752–753

of acids and conjugate bases in buffers, 752–753

of anions in weak diprotic acid solutions,
723–724

and cell potential, 865–869

and electrical current, 868

expressing, 668

and half-life of reaction, 603–604

of hydronium ions in acids, 700–709

of hydroxide ions in bases, 710–713

initial, 657–664, 743–746

and integrated rate law, 598–605

K from experimental measurements of,
652–653

and Le Châtelier's principle, 665–667

and percent ionization, 706–707

in rate laws, 593–605

and rate of reaction, 586

and reaction order, 593–597

and reaction rate, 588–589, 593–605

and selective precipitation, 777–778

of solutions, 320–324, 552–557

time dependence of, 598–605

concentration cells, **868–869**

conceptual plan, **19, 20**

concrete, **524**

condensation, **479, 807–808**

condensation polymers, **528**

condensation reactions, **967**

condensed states, **463, 466–478**. *See also*

liquid(s); solid(s)

condensed structural formulas, **939**

conduction, **168**

conduction band, **525**

conductivity, **526–527**

coniine, **687**

- conjugate acid–base pairs
 in buffers, 750–751
 identifying, 690–691
 strength of, 714
- conjugate acids
 in Brønsted–Lowry definition, 690–691
 in buffers, 750–751
 cations as, 717
- conjugate bases
 in Brønsted–Lowry definition, 690–691
 in buffer solutions, 740–741
 concentrations of, 752–753
- connectivity, in structural formula, **939**
- conservation of energy, law of, **16, 368–373**
- conservation of mass, law of, **40, 42**
- constant composition, law of, **43**
- constant-pressure calorimetry, **385–387**
- constant-volume calorimetry, **379–381, 387**
- constructive interference, **80, 506–507**
- continuous spectrum, **85**
- conversion factor(s), **17–19**
 from chemical formulas, 184–185
 concentrations as, 557
 density as, 23
 mass percent composition as, 182–183
 molarity as, 321–322
- coordinate covalent bonds, **219, 990**
- coordination compounds
 applications of, 1005–1007
 bonding in, 999–1005
 coordination numbers of, 992–993
 geometries of, 992–993
 isomerism of, 995–999
 ligands in, 990–992
 naming of, 993–994
- coordination isomers, **995**
- coordination numbers, **510, 992–993**
- Copernicus, Nicolaus, **41**
- copolymers, **528**
- copper, **57, 60**
 atomic mass, 55
 in concentration cells, 868–869
 density, 15
 ductility, 518
 electron configuration, 127–128
 emission spectra, 88
 heat capacity, 375
 and H^+ ions, 861, 864–865
 and magnesium ions, 354
 molar mass, 58
 and zinc, 849, 850, 852–853, 873–874
- copper(II) ions, **172, 354**
- copper(II) oxide, **172**
- copper plating, **878**
- copper(II) sulfate pentahydrate, **174**
- core electrons, **124–125, 270**
- corrosion, **879–881**. *See also* rusting
- corundrum, **880**
- Coulomb's law
 and intermolecular forces, 467
 and lattice energy, 168, 400
 and sublevel energy splitting, 118–119
 and types of chemical bonds, 160–162
- countability, of matter, **57**
- counterions, **717, 990**
- covalent bonding, **161, 175–177**
- covalent bonds
 carbon in, 936
 coordinate, 219, 990
 defined, 162
 ionic vs., 161
 and Lewis model, 166
 nonpolar, 208
 polar, 206–207
- covalent compounds, **211**
- covalent radius (bonding atomic radius), **131**
- creativity, in science, **40–41**
- Crick, Francis H. C., **507**
- critical mass, **911**
- critical point, **487, 492**
- critical pressure (P_c), **487**
- critical temperature (T_c), **487**
- crystal (leaded glass), **525**
- crystal field, **985–986**
- crystal field strength
 and color of complex ions, 1001–1003
 and magnetic properties, 1003–1004
- crystal field theory (CFT), **986, 1000–1005**
 color of complex ions and crystal field strength, 1001–1003
 magnetic properties and crystal field strength, 1003–1004
 octahedral complexes and d orbital splitting, 1000–1001
 tetrahedral/square planar complexes and d orbital splitting, 1004–1005
- crystalline lattice, **508**
- crystalline solids, **505–531**
 and band theory, 525–526
 in ceramics, cement, and glass, 523–525
 closest-packed structures of, 514–516
 defined, 465
 fundamental types, 516–519
 and graphene discovery, 504–506
 ionic, 519–520
 network covalent atomic, 520–523
 and semiconductors, 526–527
 unit cells of, 508–514
 X-ray crystallography of, 506–508
- crystallography, X-ray, **506–508**
- crystals
 delocalization of atomic orbitals over, 525
 diffraction from, 507
 perfect, 815–816
- C_s (specific heat capacity), **374–375**
- cubic closest packing, **515–516**
- cubic unit cells, **508–509**
- curie (Ci), **920**
- Curie, Eve, **895**
- Curie, Irène, **895**
- Curie, Marie Skłodowska, **48, 52, 893, 895, 918**
- Curie, Pierre, **895**
- curium, **52, 895**
- current. *See* electrical current
- cyanate ion, **216**
- cyclohexane, **191, 937**
- cyclopropane, **601**
- cyclotron, **918, 919**
- cytochrome c, **1005, 1006**
- D**
- d*. *See* density
- Dalton, John, **40, 41, 44, 45, 52, 54**
- Dalton's law of partial pressures, **433–434**
- daughter nuclide, **896**
- Davissson-Germer experiment, **88**
- d block, **125–127**
- Dead Sea Scrolls, **907**
- de Broglie, Louis, **75, 88**
- de Broglie relation, **89**
- de Broglie wavelength, **89–90**
- decane, **938, 944**
- decay
 alpha, 895–897, 900
 beta, 895, 897–900
 radioactive, 904–907
 radioactive decay series, 902–903
- decimal places, significant digits and, **12**
- decomposition
 of carbon dioxide, 43, 371
 of carbon tetrachloride, 814
 of hydrogen disulfide, 662–664
 of ozone, 609, 617–618
 standard heat of formation for, 395
 of water, 43, 186, 872–873
- deep-sea diving, **435–436**
- definite proportions, law of, **43**
- degenerate orbitals, **118**
- dehydration reactions, **962**
- delocalized electrons, **213, 266–277**
 in linear combinations of atomic orbitals, 267–270
 of second-period heteronuclear diatomic molecules, 276–277
 of second-period homonuclear diatomic molecules, 270–275
- delocalized orbitals, **525**
- Democritus, **41**
- density (d)
 of aluminum, 112–113, 513–514
 calculating, 14–15
 as conversion factor, 23
 and crystal structure, 513–514
 of gases, 417, 430–432
 of ideal gases, 426
 as periodic property, 114
 probability, 99–101
- deoxyribonucleic acid (DNA), **507**
- deposition, **487**
- depth, pressure and, **421**
- derived units, **7**
- destructive interference, **80, 268, 506–507**
- deterministic laws, **92**
- deuterium, **917**
- dextrorotatory isomers, **942**
- diagnostic medical procedures, radioactivity in, **922–923**
- diamagnetism, **136–137, 1003**
- diamminetetrachloroplatinate(III), **993**
- diamond, **37**
 as atomic solid, 518
 graphite from, 798–799
 properties, 521
 as solid, 464
 standard entropy, 817
- diatomic elements, **175–176, 222**

diatomic molecules
 second-period heteronuclear, 276–277
 second-period homonuclear, 270–275
 diborane, **210**
 1,2-dichlorobenzene, **958**
 1,3-dichlorobenzene, **958**
 1,4-dichlorobenzene, **958**
meta-dichlorobenzene, **958**
ortho-dichlorobenzene, **958**
para-dichlorobenzene, **958**
 dichloroethane, **954–955**
 1,2-dichloroethane, **259–260, 952**
 1,2-dichloroethene, **259–260, 952–953**
cis-1,2,-dichloroethene, **953**
trans-1,2,-dichloroethene, **953**
 dichloromethane, **485, 954**
 diethyl ether, **484, 968**
 differential rate law, **599**
 diffraction
 electron, 89
 light, 80, 81
 X-ray, 507–508
 diffraction patterns, **507**
 diffusion, **443**
 dihydrogen sulfide, **253–255**
 dilute acids, **694**
 dilute buffers, **753**
 dilute solutions, **320, 552**
 dilutions, **322–324**
 dimensional analysis, **18–19**
 dimers, **528**
 dimethyl ether, **473**
 dimethylglyoxime (dmg), **1005**
 3,4-dimethyl-3-hexene, **951**
 2,4-dimethylpentane, **948**
 dinitrogen monoxide, **44, 178, 592**
 diodes, **527**
 dipole(s)
 instantaneous, 468
 ion–dipole forces, 475
 ion–dipole interactions, 547
 permanent, 470
 temporary, 468
 dipole–dipole forces, **470–472**
 dipole moment (μ)
 and boiling point, 471
 and bond polarity, 208–209
 of polar molecules, 237
 dipropyl ether, **968**
 diprotic acid(s)
 anions in weak, 723–724
 defined, 693
 properties of, 338
 titrations of, 766
 Dirac, P. A. M., **75, 91**
 directional bonds, **177**
 dispersal of energy, **541, 797, 801, 808**
 dispersion forces, **467–469**
 dissociation
 photodissociation, 618
 of polyprotic acids, 724
 and strength of acids/bases, 689
 of strong bases, 710
 dissolution, **799–800, 818–819, 861**
 disubstituted benzenes, **958**

dmg (dimethylglyoxime), **1005**
 DNA (deoxyribonucleic acid), **507**
 Döbereiner, Johann, **114**
 DOE (U.S. Department of Energy), **296**
 doping, semiconductor, **526–527**
d orbitals
 and colors of rubies and emeralds, 984–986
 hybridization of, 262–263
 maximum electrons in, 122
 shape of, 100, 102
d orbital splitting
 and octahedral complexes, 1000–1001
 and tetrahedral/square planar complexes, 1004–1005
 dose, radiation, **920–922**
 double bond(s)
 carbon in, 936–937
 covalent, 176
 and electron groups, 223
 and sp^2 hybridization, 257–260
 drugs, coordination compounds as, **1007**
 dry-cell batteries, **870**
 dry ice, **180, 464, 488, 493, 517**
 ductility, of metals, **518**
 duet, **166**
 dynamic equilibrium
 defined, 641–642
 in solutions, 549
 and vapor pressure, 481–482

E

E (internal energy), **370–373**
 ΔE (internal energy change), **379–382**
 E_a . See activation energy
 EA (electron affinity), **144–145**
 Eagle Nebula, **62**
 ears, pressure imbalance in, **418**
 E_{cell} . See cell potential
 E_{cell}° . See standard cell potential
 ectotherms, reaction rates in, **585–586**
 Eddington, Sir Arthur, **797**
 edge length, **512**
 EDTA⁴⁻ ion (ethylenediaminetetraacetate ion), **991, 1005**
 effective nuclear charge (Z_{eff}), **119, 133–134**
 effusion of gases, **443–444**
 eigenstates, **93**
 Einstein, Albert, **3, 52, 75, 82–84, 370, 911–912, 914**
 einsteinium, **52**
 eka-aluminum, **115**
 eka-silicon, **115**
 elastic collisions, **416**
 elBulli, **319**
 electrical charge
 in batteries and lightning, 844–846
 of electrons, 46–47, 50
 of neutrons, 50
 of protons, 50
 electrical current
 and concentration, 868
 continual flow of, 850
 driving force for, 851
 in electrolytic cells, 872

and potential difference, 850–852
 in voltaic cells, 849
 electric field, **46, 76**
 electricity
 from batteries, 870–872
 driving nonspontaneous reactions with, 872–879
 efficiency of heating with, 798
 from nuclear power, 912–914
 from spontaneous reactions, 849–853
 electrochemical cells
 concentration cells, 868–869
 defined, 849
 drawing, 860
 notation for, 852–853
 electrochemistry, **845–884**
 balancing redox reactions, 846–849
 batteries, 844–846, 870–872
 cell potential, 861–869
 corrosion, 879–881
 electrolysis, 872–879
 lightning, 844–846
 standard electrode potentials, 854–861
 voltaic cells, 849–853
 electrodes, **850**. See also standard electrode potentials
 platinum, 853, 854
 sacrificial, 881
 standard hydrogen, 854–856
 electrolysis, **872–879**
 predicting products of, 875–878
 stoichiometry of, 878–879
 voltaic cells vs. electrolytic cells, 873–874
 electrolyte(s)
 dissociation of, 558
 and rusting, 880
 strong, 328, 329, 569–572, 688
 weak, 329, 688
 electrolyte solutions, **327–329, 569–572**
 electrolytic cells
 for copper plating, 878
 current in, 872
 defined, 849
 voltaic vs., 873–874
 electromagnetic radiation, **76–77, 898**
 electromagnetic spectrum, **78–80**
 electromotive force (emf), **851**
 electron(s)
 absorption of, 899
 core, 124–125, 270
 delocalized, 213, 266–277
 discovery of, 45–47
 electrical current and rate of, 850
 energy of, 93
 of ions, 54
 localized, 213
 nonbonding, 175, 227
 positron as antiparticle of, 898
 properties of, 50
 in redox reactions, 349
 in resonance structures, 212–214
 transitions of, 86–87, 97–98
 unpaired, 252, 274
 valence, 124–128, 164–166
 wave nature of, 88–89

- electron affinity (EA), **144–145**
- electron capture, **895, 899**
- electron configurations, **117–131**
for families of elements, 129–130
of ions, 130–131, 136–137
of metals and nonmetals, 128–129
and orbital filling, 117–124
of transition metals, 986–987
of valence electrons, 124–128
- electron diffraction, **89**
- electronegativity
and bond polarity, 207–208
and energy of orbitals, 276
and percent ionic character, 209
and strength of oxyacids, 692
of transition metals, 988–989
- electronegativity difference, **208–209**
- electron geometry
basic shapes, 223–226
hybridization and bonding schemes from, 263–264
and lone pairs, 227–231
and molecular geometry, 232
- electron groups
defined, 223
and geometry, 223–226, 231
and lone pairs, 227–231
- electron orbitals, **93**
- electron pairs
bonding, 175, 227
and Lewis acids/bases, 725
lone pairs, 175, 227–231, 711
- electron sea model, **518**
- electron spin, **95, 117, 121**
- electron transfer, **166–167, 845**
- electron volt (eV), **915**
- electrostatic forces, **46**
- electrostatic potential maps, **206, 326, 349, 472, 965**
- element(s). *See also* main-group elements; transition metals (transition elements)
atomic masses, 54–57
atomic spectroscopy and identification of, 87–88
compounds vs., 158–160
defined, 39
diatomic, 175–176, 222
electronegativities, 207
families of, 129–130
groups of, 116, 129–130
inner transition, 127–128
mass percent, 181
molar masses, 58–59
octaves of, 114
origins of, 62
proton numbers, 50–52
standard enthalpies of formation, 393
standard free energies of formation, 821, 822
transuranium, 919
triads of, 114
- elementary steps, **613–614**
- elimination reactions, **962**
- emeralds, color of, **985–986**
- emf (electromotive force), **851**
- emission
gamma ray, 895, 898
of light, 894
positron, 895, 898–899
- emission spectra, **85–88, 97**
- empirical formula molar mass, **188**
- empirical formulas
from combustion analysis, 190–191
defined, 162
from experimental data, 187
from molecular formulas, 163
- enantiomers, **942–943, 998**
- endogenous (term), **206**
- endorphins, **206**
- endothermic processes
defined, 18
particle view of, 383
in solution, 545
spontaneous, 799
vaporization, 479
- endothermic reactions
and bond energies, 391
defined, 382
and lattice energies, 401
Le Châtelier's principle for, 670–672
spontaneity of, 813–814
- endpoint of titration, **767**
- energy, **15–18, 368**
activation, 587, 606–610
in batteries, 798, 825–826
binding, 81–82
bond, 220–221, 255, 389–392
for bonding/breaking bonds, 389–391
chemical, 16, 368
conservation of mass–energy, 370
converting mass to, 914–916
defined, 15
dispersal of, 541, 797, 801, 808
of electrons, 93
exchange of, 416
free. *See* free energy
heat tax on transfers of, 797–798, 826
interaction, 252–253
internal, 370–373
ionization, 140–144, 988
kinetic, 15, 368, 369, 416, 440
lattice, 167–168, 398–401
law of conservation of, 16, 368–373
of melting and freezing, 488–489
nature of, 15–16, 368–369
nuclear binding, 915–916
and octet rule, 177
of orbitals, 267, 268, 276
“places” for, in states of matter, 805, 818
potential. *See* potential energy
quantifying changes in, 17–18
quantization of, 82–85
randomization of, 541
sign conventions for, 373
in solution formation, 544–548
sublimation, 398
and temperature, 478–479
thermal. *See* thermal energy
total, 15
transfers of, 368–369, 797–798, 826
units of, 16–17
and vaporization, 479–481
- energy bands, **525–526**
- energy density, for rechargeable batteries, **871**
- energy diagrams, **371, 615, 619**
- English system of units, **4**
- enthalpy (H), **381–385**
- enthalpy change (ΔH), **385–389**
in chemical reactions, 385–398
in endothermic vs. exothermic processes, 382–384
internal energy change vs., 382
and spontaneity, 812–815
standard, 392–395
stoichiometry with, 384–385
- enthalpy of reaction (ΔH_{rxn}), **385–398**
from bond energies, 389–392
in coffee-cup calorimeter, 386–387
and Hess's law, 387–389
measuring, 385–387
relationships involving, 387–390
standard, 815, 820–821
standard change in free energy from, 820–821
from standard enthalpies of formation, 392–398
stoichiometry involving, 384–385
- enthalpy of solution (ΔH_{soln}), **545–547**
- enthalpy of vaporization. *See* heat of vaporization (ΔH_{vap})
- entropy (S), **798–810, 815–819**
in biological systems, 810
defined, 800
and energy dispersal, 797
in microstates and macrostates, 800–801
and second law of thermodynamics, 799–804
and solutions, 540–541
standard molar, 815–819
units of, 800, 806
of universe, 801–802
- entropy change (ΔS), **802–807**
and changes in state, 804–807
in chemical reactions, 815–821
defined, 801, 803, 806
with expansion of real gases, 802–804
and heat transfer, 807–810
predicting sign of, 805
and spontaneity, 812–815
standard, 815, 819
- entropy change for a reaction. *See* standard entropy change for a reaction ($\Delta S_{\text{rxn}}^\circ$)
- entropy change for surroundings (ΔS_{surr}), **807–810**
and entropy change in universe, 807–808
quantifying, 809–810
temperature dependence of, 808–809
- enzymes, **621–622, 943**
- equations. *See also* specific equations
chemical. *See* chemical equations
nuclear, 896, 897
problems involving, 20, 24–25
quadratic, 658
two-point forms of, 486, 610
- equatorial positions, **225**

equilibrium, **639–675**. *See also* aqueous

ionic equilibrium

complex ion, 778–783
concentration change and, 665–667
dynamic, 481–482, 549, 641–642
and fetal hemoglobin, 638–641
free energy change of reactions in, 827
and Gibbs free energy, 829–832
heterogeneous, 650–651
Le Châtelier's principle for, 665–672
and pH changes in buffers, 747–748
pressure changes and, 667–669
and reaction quotient, 653–656
solubility, 769–775
in solutions, 548–552
temperature changes and, 670–672
thermal, 374
volume changes and, 667–669

equilibrium approach to calculating pH, **745–746**

equilibrium concentration, **656–664**

equilibrium constant from, 651–653
from K and concentrations of products and reactants, 656–657
from K and initial concentrations/pressures, 657–661
and pH of weak acids, 701, 707
simplifying approximations of, 661–664
with small K , 662–664

equilibrium constant (K), **639, 642–653**

approximations in problems with, 661–664
and chemical equations, 644–647
for chemical reactions, 644
defined, 643
and direction of change, 654–656
and equilibrium concentrations, 651–653, 656–661
for fetal hemoglobin, 640
for heterogeneous equilibria, 650–651
for ionization of weak acid, 694–696
large, 644
and law of mass action, 643
from pH, 705
pressure, 647–650
significance of, 644–645
small, 645, 661–664
and standard cell potential, 864–865, 868
and standard change in free energy, 829–832
temperature dependence of, 831–832
units of, 649–650

equivalence point

defined, 343, 344, 755
in titration of strong acids, 756, 757, 759
in titration of weak acids, 760, 762–763

error, **10**

ester(s), **966–968**

estimations, **9, 23–24**

ethanal (acetaldehyde), **265, 965**

ethane, **470–471, 936, 944**

ethanoic acid. *See* acetic acid

ethanol (ethyl alcohol), **37**

acetic acid from, 966
combustion of, 307, 367–368, 382
dilution of, 324
dimethyl ether vs., 473

and ethylene glycol poisoning, 740

from glucose, 961
hydrogen bonding in, 473
ice cubes of, 366–368
oxidization of, 965
reactions of, 962
in solution with water, 540
uses of, 961

ethene (ethylene)

and chlorine, 954–955
double bond in, 936
from ethanol, 962
formula and models of, 949
hybridization and bonding scheme for, 266
and hydrogen, 612
hydrogenation of, 620–621
and hydrogen chloride, 955
polymers of, 527–528
standard entropy, 818
triple bond in, 192
uses, 949

ethers, **968**

ethyl alcohol. *See* ethanol

ethylamine, **968**

ethylbenzene, **957, 959**

ethyl butanoate, **967**

4-ethyl-2,7-dimethyloctane, **946–947**

ethylene. *See* ethene

ethylenediamine ligand, **990**

ethylenediaminetetraacetate ion (EDTA^{4-}), **991, 1005**

ethylene glycol

in antifreeze, 564, 739–740
freezing point of, 565
solution of, 556

ethylmethylaniline, **968**

3-ethylpentane, **946–947**

ethyl pentanoate, **966**

ethyl propyl ether, **968**

ethyne (acetylene)

formula and models of, 165, 949
hybridization of, 261–262
triple bond in, 192, 936
uses, 950

europium, **52**

eV (electron volt), **915**

evaporation. *See* vaporization

exact numbers, **11–12**

excitation, radiation and, **96–97**

exothermic processes

defined, 18
particle view of, 383
in solution, 544, 545

exothermic reactions

and bond energies, 391
defined, 382, 671
and lattice energies, 167–168, 401
Le Châtelier's principle for, 670, 672
spontaneity of, 812, 813

expanded octets, **210, 217, 219–220**

expansion of real gases, **802–804**

experiments, **39, 40**

exponential factors, **607–608**

exponents, **644**

exposure, radiation, **920–922**

extensive properties, **14, 816**

extrapolation, **422**

F

face-centered cubic unit cell, **512–514**

fac-mer isomerism, **997**

Fahrenheit scale ($^{\circ}\text{F}$), **5**

falsifiability, **40**

family(-ies)

of elements, 116, 129–130
of organic compounds, 960

Faraday's constant, **862, 878**

f block, **125–128**

FDA (U.S. Food and Drug Administration), **183, 924**

Fermi, Enrico, **910**

Fermi National Accelerator Laboratory, **919**

fermium, **910**

fetal hemoglobin, **638–641**

Feynman, Richard P., **367**

find information (in problem solving), **20, 24**

fireworks, **88**

first ionization energy (IE_1), **140–143, 988**

first law of thermodynamics, **370–373, 797, 803**

first-order reactions

defined, 594
half-life of, 603–604
identifying, from experimental data, 594
integrated rate law for, 599–601

fishing flies, **476**

fission, nuclear, **910–914**

flame tests, **87**

flaming ice demonstration, **366–368**

flash freezing, **495**

fluids

intravenous, 571–572
supercritical, 487

fluoride ions, **136**

fluorine

and boron, 218–219
and bromine, 308
electron configuration, 136
electronegativity, 207, 277
family of, 130
formal charge, 215
hybrid orbitals, 263
hydrogen bonding with, 472–473
Lewis structure, 165
and magnesium, 169
and potassium, 169

fluorine-18 isotope, **923**

fluorine ions, **54**

fluorite (CaF_2) structure, **520**

fluoromethane, **474**

food, irradiation of, **924**

f orbitals, **102–103, 122**

force(s). *See also* intermolecular forces

adhesive, 477–478
attractive, 901
cohesive, 477–478
from collisions of gas particles, 417, 428–429
electromotive, 851

force(s) (*cont.*)
 electrostatic, 46
 intramolecular, 177
 and pressure, 415
 and pressure–volume work, 378
 in solutions, 541–544
 strong, 901
 total, 428–429

formal charge, **215–217**

formaldehyde
 addition reaction with, 965
 dipole–dipole forces, 470–471
 formula and model, 963
 geometry, 224
 intermolecular forces in, 474
 uses, 964

formalin, **964**

formation, standard heat of. *See* standard enthalpy of formation (ΔH_f°)

formation constant (K_f), **778–779**

formic acid, **694, 754, 966**

formula mass, **179**

formula unit, **166**

forward direction, spontaneous reactions in, **355**

fossil fuels, combustion of, **286–289, 295–297**

4f orbitals, **102–103**

francium, **207**

Franklin, Rosalind, **507**

free energy, **811–815**
 and cell potential/equilibrium constant, 861–865
 Gibbs, 811–812
 of reversible reactions, 824–826

free energy change (ΔG), **812–815**
 defined, 811
 and equilibrium, 829–832
 and Le Châtelier's principle, 829
 and Nernst equation, 866
 in nonstandard states, 826–829
 and spontaneity, 812–815
 standard, 820–832
 theoretical limit on, 825–826

free energy change of reaction under nonstandard conditions (ΔG_{rxn}), **826–829**

free energy of formation (ΔG_f°), **821–823**

free radicals, **218, 954**

freezing
 energy of, 488
 flash, 495
 of water, 807–809, 813

freezing point depression, **563–565, 569–570**

Freon-112 refrigerant, **182**

frequency (ν), **77–79, 82, 84**

frequency factor (A)
 in Arrhenius equation, 607
 from Arrhenius plots, 608–610
 and collision model, 611–612
 defined, 606

Friday night experiments, **505–506**

fructose, **188**

fuel cells, **872, 873**

Fukushima Daiichi Nuclear Power Plant accident (**2011**), **913, 914**

Fuller, R. Buckminster, **522**

fullerenes, **522**

functional groups, **960**. *See also* specific types

fused silica, **525**

fusion (melting), **489–490**

fusion (nuclear), **916, 917**

G

G. *See* Gibbs free energy

ΔG . *See* free energy change

gadolinium, **128**

Galileo Galilei, **41**

gallium, **115, 527**

galvanic (voltaic) cells, **849–853, 873–874**

gamma (γ) ray emission, **895, 898**

gamma (γ) rays, **78–79, 898**

garnet, **986**

gas(es), **393, 415–453**
 Avogadro's law, 424–425
 Boyle's law, 420–422
 Charles's law, 422–424
 collecting, over water, 438–439
 defined, 37, 38
 density, 430–432
 diffusion of, 443
 dipole moments, 209
 effusion of, 443–444
 entropy and state changes in, 804, 805, 807
 greenhouse, 286–288
 on heating curves, 489–491
 ideal gas law, 425–433, 648, 667
 kinetic molecular theory of, 415–417, 422, 428–430
 mean free path, 442–443
 mixtures of, 433–439
 molar mass, 432–433
 molar volume, 430
 noble, 128–130, 468, 518, 817
 partial pressure, 433–437
 on phase diagrams, 491–494
 pressure, 417–419
 properties of, 465
 real, 447–450
 solids and liquids vs., 464–466
 solubility of, 550–552
 standard molar entropies, 816
 standard state for, 815
 stoichiometry with, 444–446
 and sublimation, 487–488
 and supersonic skydiving, 414–416
 temperature and molecular velocities, 440–442
 and vaporization, 478–481

gas chromatographs, **592**

gas-evolution reactions, **346–347**

gasoline, **37, 464**
 alkanes in, 944
 alkynes in, 950
 combustion of, 16, 18, 289, 377–378, 797, 824–825
 ethanol in, 961
 hydrocarbons in, 937

gauge pressure, **427**

Gay-Lussac's law, **426**

Geiger-Müller counter, **903**

Geim, Andre, **505, 506**

genetic defects, **920**

geodesic dome, **522**

geometric isomerism, **952–953, 996–997**

geometry. *See* electron geometry; molecular geometry

geraniol, **936**

germanium, **115, 125**

Gibbs free energy (G), **811–812**. *See also* free energy change (ΔG)

given information (in problem solving), **20, 24**

glass, **524–525**

glassblowing, **524, 525**

global warming, **288**

glowing, **894**

glucose
 alcohols from, 961
 formation of, 289, 297
 formula and models, 165
 formula mass, 179
 optical isomers, 942
 oxidation of, 824
 in respiration, 1007
 in solution, 557
 in wood frogs, 538–540

glycine, **234**

glycolic acid, **740**

ΔG_f° (free energy of formation), **821–823**

gold, **354, 355, 518, 918, 989**

gold foil experiment, **48–49**

gold plating, **879**

Gore, George, **205**

Graham, Thomas, **443**

Graham's law of effusion, **443–444**

graphene, **504–506, 521, 522**

graphite, **37, 518**
 conversion of diamond to, 798–799
 in lithium ion batteries, 872
 methane from, 393
 properties, 521
 standard entropy of, 817

gravitational pull, **5**

gravity, water in absence of, **462–464**

gray (Gy), **920**

grease, solubility in water, **540**

greenhouse effect, **288**

greenhouse gases, **286–288**

ground state, **117**

groups of elements, **116, 129–130**

ΔG_{rxn} (free energy change of reaction under nonstandard conditions), **826–829**

$\Delta G_{\text{rxn}}^\circ$. *See* standard change in free energy

Gy (gray), **920**

gypsum, **524**

H

H (enthalpy), **381–385**

ΔH . *See* enthalpy change

ΔH° (standard enthalpy change), **392–395**

H_3O^+ ions. *See* hydronium ions

Hahn, Otto, **910**

hair, bleaching of, **347**

half-cell, **850**

half-cell potential, measuring, **855–856**

half-equivalence point, **761, 766**

- half-life ($t_{1/2}$) of reaction, **603–604, 904–907**
 half-reactions
 on activity series of metals, 355
 balancing redox equations with, 846–848
 halides, **174**
 halogenation, **954**
 halogens, **130, 308–309**
 halogen substitution reactions, **954**
 hard water, **331**
 harpoon mechanism, **612**
 HDPE (high-density polyethylene), **528**
 heat
 in chemical reactions, 381–385
 in constant-pressure calorimeters, 385
 and energy, 368
 and entropy changes for surroundings, 809–810
 and internal energy, 372–373
 quantification of, 373–377
 transfer of, 807–810
 heat at constant volume (q_v), **380**
 heat capacity (C), **374–376, 380**
 heating, with natural gas vs. electricity, **798**
 heating curve for water, **489–491**
 heat of fusion (ΔH_{fus}), **488–489**
 heat of hydration ($\Delta H_{\text{hydration}}$), **546–548**
 heat of reaction. *See* enthalpy of reaction (ΔH_{rxn})
 heat of vaporization (ΔH_{vap}), **480–481, 489**
 heat tax, **797–798, 826**
 Heisenberg, Werner, **75, 91**
 Heisenberg's uncertainty principle, **90–92**
 heliox mixture, **436–437**
 helium, **38, 39, 52, 130, 464**
 behavior, 35, 449
 density, 430–431
 dispersion forces in, 467–468
 effective nuclear charge, 134
 effusion of, 443
 electron configuration, 117–118, 166
 emission spectra, 85, 86
 Lewis structure, 165, 166
 mass, 49
 molar mass, 59
 molecular orbital diagram, 269
 origin of, 62
 valence electrons, 126, 128
 helium-4 isotope, **896, 915, 917**
 heme, **1006**
 hemlock, **687**
 hemoglobin
 as coordination compound, 1005–1007
 fetal, 638–641
 and oxygen, 740
 Henderson–Hasselbalch equation, **743–746, 750–751**
 Henry's law, **551–552**
 Henry's law constant, **551**
 heptane, **542**
 2-heptanone, **964**
 Hess's law, **387–389, 395, 398, 399, 545, 823**
 heterogeneous catalysis, **620–621**
 heterogeneous equilibrium, **650–651**
 heterogeneous mixtures, **39**
 heteronuclear diatomic molecules, **276–277**
 hexaamminecobalt(III), **993, 1003**
 hexaamminecobalt(II) ion, **1003**
 hexagonal closest packing, **515**
 hexamethylenediamine, **528**
 hexane, **944**
 as solvent, 542, 544
 structural formula, 940
 structural isomers of, 938
 3-hexanone, **964**
 ΔH_f° . *See* standard enthalpy of formation
 ΔH_{fus} (heat of fusion), **488–489**
 $\Delta H_{\text{hydration}}$ (heat of hydration), **546–548**
 high-density polyethylene (HDPE), **528**
 high-spin complexes, **1003–1004**
 Hinshelwood, Cyril N., **585**
 H^+ ions, copper and, **861, 864–865**
 Hiroshima, Japan, **912**
 HIV protease, **507**
 Hoffmann, Roald, **463, 478**
 homogeneous catalysis, **620**
 homogeneous mixtures, **39**
 homonuclear diatomic molecules, **270–275**
 Hooke, Robert, **420**
 $\Delta H_{\text{rxn}}^\circ$ (standard enthalpy change for a reaction), **820–821**
 hot-air balloon, **423**
 ΔH_{rxn} . *See* enthalpy of reaction
 ΔH_{soln} (enthalpy of solution), **545–547**
 Hund's rule, **121–122, 256**
 ΔH_{vap} (heat of vaporization), **480–481, 489**
 hybridization
 of atomic orbitals, 252, 254–266, 1000
 resonance, 213, 214
 sp , 261–262
 sp^2 , 257–260
 sp^3 , 255–257
 sp^3d , 262
 sp^3d^2 , 263
 hybridization and bonding schemes, **263–266**
 hybrid orbitals, **254–266, 1000**
 hybrids, **213, 214, 255**
 hydrated aluminum ions, **782–783**
 hydrates, **174**
 hydrides, **692**
 hydrobromic acid, **339, 962**
 hydrocarbons, **192, 937–959**
 aliphatic, 937–938
 aromatic, 937, 956–959
 classification, 937–938
 isomerism in, 941–943
 oxidation of, 822
 reactions of, 953–956
 saturated, 944–948
 structures, 938–941
 unsaturated, 948–953
 uses, 945
 viscosity, 477
 hydrochloric acid, **339**
 acid ionization constant, 693
 dilution of, 322
 and limestone, 346
 and magnesium, 386–387
 and methylamine, 969
 properties, 338
 and sodium bicarbonate, 346–347
 and sodium hydroxide, 340–341
 in solution, 329
 titration of, 756–758
 uses, 686
 and zinc, 338, 438, 439, 861
 hydrofluoric acid, **342, 714**
 hydrogen
 from alcohol and metal reaction, 962
 and ammonia, 43, 667–669
 and carbon, 825
 and chlorine, 208, 349
 collecting, over water, 438, 439
 color code, 36
 from combustion analysis, 189–191
 combustion of, 307, 348
 density, 430–431
 effective nuclear charge, 134
 from electrolysis of aqueous sodium chloride, 877
 electron configuration, 117
 electronegativity and energy of orbitals, 277
 emission spectrum, 85, 86
 and ethene, 612
 formal charge, 215
 formation of, 388, 392, 438, 439, 824
 interaction energy, 252–253
 and iodine, 588–590, 592, 595–596, 641–643, 651
 and iodine monochloride, 613
 Lewis structure, 176
 mass, 49
 molecular orbital diagram, 268–269
 and nitrogen, 446, 667–670
 and nitrogen monoxide, 596, 616–617
 origin of, 62
 and oxygen, 177, 391
 and propene, 955
 properties of water vs., 158–160
 as reducing agent, 352
 Rydberg constant, 94
 Schrödinger equation, 94–96
 standard hydrogen electrode, 854–856
 transitions in, 86–87, 97–98
 unhybridized valence electrons of, 258, 261
 from water, 36, 43, 185, 186, 872–873
 hydrogenation, **620–621**
 hydrogen bombs, **917**
 hydrogen bonding, **472–474, 495**
 hydrogen bonds, **472–474**
 hydrogen bromide, **956**
 hydrogen chloride, **955**
 hydrogen disulfide, **662–664**
 hydrogen fluoride, **206, 207**
 hydrogen halides, **308, 691–692**
 hydrogen monochloride, **688**
 hydrogen–oxygen fuel cell, **872, 873**
 hydrogen peroxide, **162–163, 176, 474**
 hydrogen sulfide, **253–255**
 hydroiodic acid, **339**
 hydronium ions (H_3O^+)
 in acidic solutions, 696, 697
 and Arrhenius definition of acids, 338
 concentration of, 700–709
 defined, 688
 and percent ionization, 706–707
 and pH, 698–699
 water vs., 176

hydroxide ions (OH^-)
 in basic solutions, 697
 concentration of, 710–713
 and pH, 699
 and pOH, 699–700
 precipitation with, 777–778
 hydroxides, 774
 hydroxyl group, 961
 hyperosmotic solutions, 571
 hypochlorite ion, 173, 174
 hypochlorous acid, 754
hypo- prefix, 174
 hyposmotic solutions, 571
 hypothesis, 40
 hypoxia, 435

I

i (van't Hoff factor), 569–570

ice, 37, 464, 517
 cooling water with, 491
 flaming ice demonstration, 366–368
 formation of, 813
 on heating curve, 489, 490
 melting of, 488, 806
 sublimation of, 487–488

ICE table, 652–653, 701, 703–704

ideal gas(es), 426
 entropy change with expansion of, 802–804
 real gases vs., 449–450
 solutions of, 541

ideal gas constant, 426

ideal gas law, 425–433, 648, 667
 calculations using, 427–428
 defined, 425–426
 and density of gases, 430–432
 and kinetic molecular theory, 428–430
 molar mass of gas, 432–433
 molar volume at STP, 430
 and simple gas laws, 426

ideal solutions, 560–561

IE (ionization energies), 140–144, 988

IE₁. *See* first ionization energy

IE₂ (second ionization energy), 140, 143–144

IE₃ (third ionization energy), 140

incomplete octets, 217, 218

indeterminacy, 92–93

indicators, 344, 755, 767–769

inelastic collisions, 416

inert platinum electrodes, 853, 854

infrared (IR) radiation, 79

initial concentration

equilibrium concentration and, 657–664
 and pH of buffer solution, 743–746

initial rates, method of, 594–595

inner electron configuration, 122, 126

inner transition elements, 127–128

in phase (term), 80

insect control, with radioactivity, 924

insoluble compounds, 329–331, 334, 540, 775

instantaneous dipoles, 468

instantaneous rate of reaction, 590

integrated rate law, 598–605

first-order, 599–601
 and half-life of reaction, 603–604

for radioactive decay, 905–907
 second-order, 601–602
 zero-order, 603

intensity

of light, 77, 83, 84
 of mass spectrum peaks, 56

intensive properties, 14

interaction energy, 252–253

interference

constructive, 80, 506–507
 destructive, 80, 268, 506–507
 electron, 88
 light, 80, 81

interference patterns, 80, 88, 91, 506

interhalogen compounds (interhalides), 308

intermediates, reaction, 347, 613

intermolecular forces, 466–478

and capillary action, 477–478
 defined, 463, 464
 dipole–dipole, 470–472
 dispersion, 467–469
 and hydrogen bonding, 472–474
 of ideal gases, 426
 ion–dipole, 475
 in molecular compounds, 177
 of real gases, 448–449
 in solutions, 541–544
 and surface tension, 476–477
 and viscosity, 477
 and water in absence of gravity, 462–464

internal energy (*E*), 370–373

internal energy change (ΔE), 379–382

International Bureau of Weights and Measures,
 4, 5

International System of Units (SI), 4–8

International Union of Pure and Applied
 Chemistry (IUPAC), 54, 945

intramolecular forces, 177

intravenous fluids, 571–572

inverse relationships, 420

iodate, 174

iodine

and chlorine, 309
 family of, 130
 and hydrogen, 588–590, 592, 595–596,
 641–643, 651
 on periodic table, 115
 phase diagrams, 493

iodine-131 isotope, 922

iodine monochloride, 613

ion(s), 136–144. *See also* specific ions; specific types

acid–base properties of, 713–718
 after selective precipitation, 777–778
 charge on, 400–401
 common ion effect, 742–743, 773–774
 electron configurations of, 130–131, 136–137
 electrons of, 54
 formation of, 130–131
 ionic radii, 138–140
 ionization energy, 140–144
 magnetic properties of, 136–137
 size of, 400
 in strong electrolyte solutions, 569

ion–dipole forces, 475

ion–dipole interactions, 547

ionic bond(s), 161, 162, 166–168

ionic bonding, 166–168

covalent vs., 161
 and electron transfer, 166–167
 and lattice energy, 167–168
 models vs. reality of, 168

ionic character, of bonds, 207

ionic charge, 349

ionic compounds, 169–174

balancing equations with, 294
 binary, 171–172
 chemical formulas of, 169
 defined, 162
 formation of, 161
 hydrated, 174
 lattice energies for, 398–401
 naming, 170–174
 solubility of, 329–331, 540, 769–775

ionic equations, 336–337

ionic radii, 138–140

ionic solids, 168, 517, 519–520

ionizable protons, 693

ionization

percent, 706–707
 of polyprotic acids, 720–721
 of strong acids, 693
 of strong bases, 710
 of weak acids, 694
 of weak bases, 710

ionization energies (IE), 140–144, 988

ionizing power, 897

ionone, 964–965

ion product constant for water (K_w), 696–697

iron, 508, 518

and chlorine, 308
 and hemoglobin, 1006
 from iron ore, 799
 and lead, 860
 and magnesium, 860
 oxides of, 880
 rusting of, 289, 347, 348, 798, 880–881

iron blue, 1005

iron(III) chloride, 719

iron(III) fluoride, 719

iron(II) ions, 171

iron(III) ions, 171

iron ore, 799

iron(III) oxide, 396, 524

iron(II) sulfate, 173

IR (infrared) radiation, 79

irradiation of foods, 924

irregular tetrahedron geometry, 229

irreversible reactions, 825

island (valley) of stability, 900–903

isobutane, 191, 937–939

isomerism

cis–trans, 260, 952–953, 996–997
 of coordination compounds, 995–999
 fac–mer, 997
 geometric, 952–953, 996–997
 optical, 941–943, 998–999
 stereo-, 941–943, 996–999

isomers

cis, 260, 952–953, 996–997
 coordination, 995

dextrorotatory, 942
 levorotatory, 942
 linkage, 995–996
 structural, 938, 995–996
 trans, 260, 952–953, 996–997
 isopropyl alcohol (rubbing alcohol), **464, 960, 961**
 3-isopropyl-4-methyl-1-pentyne, **951–952**
 isosmotic solutions, **571, 572**
 isothermal processes, **806**
 isotonic solutions, **571**
 isotope(s), **52–53**. *See also specific isotopes*
 atomic masses of, 54–55
 ionic radii of, 140
 natural abundance of, 52, 54, 55
 notation for, 895–896
 relative abundance of, 56
 IUPAC (International Union of Pure and Applied Chemistry), **54, 945**

J

J (joule), **16–17, 440**
 Joliot, Frédéric, **918**
 Joliot-Curie, Irène, **918**
 joule (J), **16–17, 440**
 Joule, James, **16**
 J-tube, **420**

K

K. *See* equilibrium constant
 K (kelvin), **5–6, 416**
 K_a (acid ionization constant), **693–696, 721**
 kaolinite, **523**
 K_b (base ionization constant), **710**
 Kekulé, Friedrich August, **956–957**
 kelvin (K), **5–6, 416**
 Kelvin scale, **4–6**
 Kepler, Johannes, **41**
 ketones, **963–965**
 K_f (formation constant), **778–779**
 kilogram (kg), **4, 5**
 kilowatt-hour (kWh), **17**
 kinetic energy
 average, 416, 440
 defined, 15
 and motion, 368
 and temperature, 416
 transformation of potential and, 369
 kinetic molecular theory (KMT) of gases
 and behavior of gases, 415–417
 and ideal gas law, 428–430
 and mass, 442
 kinetics
 chemical. *See* reaction rate(s)
 of radioactive decay, 904–907
 and thermodynamics, 798–799
 KMT of gases. *See* kinetic molecular theory of gases
 Kobilka, Brian, **204**
 krypton, **130, 131, 910**
 K_{sp} . *See* solubility-product constant
 Kuhn, Thomas, **41**
 K_w (ion product constant for water), **696–697**
 kWh (kilowatt-hour), **17**

L

l (angular momentum quantum number), **94**
 L (liter), **8**
 lactic acid, **966**
 lag time, **82**
 λ . *See* wavelength
 lanthanide contraction, **988**
 lateral ideas, **506**
 lattice energy(-ies), **167–168, 398–401**
 lattices, **162**
 Lavoisier, Antoine, **39, 40, 42**
 Lavoisier, Marie, **40**
 law of conservation of energy, **16, 368–373**
 law of conservation of mass, **40, 42**
 law of constant composition, **43**
 law of definite proportions, **43**
 law of mass action, **643, 645, 648, 826**
 law of multiple proportions, **44**
 laws, scientific, **40**
 LCAO (linear combination of atomic orbitals), **267–270**
 LDPE (low-density polyethylene), **528**
 lead, **170, 525, 860, 918, 1005**
 lead-206 isotope, **909–910**
 lead–acid storage batteries, **870–871**
 lead(IV) chloride, **172**
 leaded glass, **525**
 lead(II) iodide, **332, 334**
 lead(II) nitrate, **331, 332, 334, 776**
 lead(IV) oxide, **870**
 Le Châtelier, Henri, **639**
 Le Châtelier's principle, **665–672**
 and acid–base chemistry, 700, 707, 708, 722
 and buffers, 742
 and concentration change, 665–667
 and free energy changes, 829
 and temperature change, 670–672
 and volume/pressure change, 667–669
 length
 bond, 222, 400
 edge, 512
 unit of measurement, 4
 and volume, 8
 Leucippus, **41**
 levorotatory isomers, **942**
 Lewis, Gilbert N., **159, 164, 685, 725**
 Lewis acids, **725–726**
 Lewis bases, **725**
 Lewis electron-dot structures (Lewis structures), **164–166**
 and bond polarity, 206–207
 and covalent bonding, 175–177
 for molecular compounds, 210–211
 for polyatomic ions, 212
 Lewis models, **164–166**
 Lewis symbols, **165**
 Lewis theory
 exceptions to octet rule, 217–220
 formal charge in, 215–217
 for molecular compounds, 210–211
 for polyatomic compounds, 212
 resonance in, 212–214
 Libby, Willard, **907**

life, effects of radiation on, **919–922**

ligands, **778, 990–992**
 bidentate, 990, 992
 monodentate, 990
 names and formulas of, 994
 nitrito and nitro, 995–996
 strong-field, 1002, 1003
 weak-field, 1002, 1003

light, 76–85

 diffraction of, 80, 81
 in electromagnetic spectrum, 78–80
 emission of, 894
 intensity of, 77, 83, 84
 interference, 80, 81
 particle nature of, 80–85
 plane-polarized, 942–943
 visible, 78, 79
 wave nature of, 76–78
 white, 78, 85, 86

lightning, **77, 844–846**

limestone, **346, 524, 774**

limiting reactant, **299–304**

linear accelerators, **918, 919**

linear combination of atomic orbitals (LCAO), **267–270**

linear geometry, **223, 230**

linear relationships, **422**

line notation, **852–853**

lines, on phase diagrams, **492**

linkage isomers, **995–996**

liquefied petroleum (LP), **937, 944**

liquid(s)

 at critical point, 487
 defined, 37
 entropy and state changes for, 804–807
 and fusion, 489–490
 on heating curves, 489–491
 in heterogeneous equilibria, 650–651
 intermolecular forces in, 466–478
 nonvolatile and volatile, 479
 on phase diagrams, 491–494
 properties of, 465, 494–495
 solids and gases vs., 464–466
 standard molar entropies of, 816
 standard state for, 393, 815
 vaporization of, 478–481
 vapor pressure, 481–486
 water in absence of gravity, 462–464

liter (L), **8**

lithium

 effective nuclear charge, 133
 electron configuration, 121, 136
 energy levels of molecular orbitals, 525–526
 family of, 130
 flame tests for, 87
 Lewis structure, 165
 molecular orbital theory, 271
 and water, 308

lithium bromide, **547**

lithium dichromate, **174**

lithium ion batteries, **872**

lithium ions, **54, 136**

lithium phosphate, **294**

lithium sulfate, **335**

lithium sulfide, **346**

litmus paper, **686, 687**
 lizards, reaction rates in, **584–586**
 lobes, atomic orbital, **100**
 localized electrons, **213**
 logarithmic scale, **698**
 London, Fritz W., **467**
 London forces (dispersion forces), **467–469**
 lone pairs, **175, 227–231, 711**
 low-density polyethylene (LDPE), **528**
 low-spin complexes, **1003–1004**
 LP (liquefied petroleum), **937, 944**
 lung volume, **422, 425**

M

M. *See* molarity
 m (meter), **4**
 m (molality), **554**
 M16 (Eagle Nebula), **62**
 macrostates, **800–803**
 magic numbers, **902**
 magnesium
 and copper ions, **354**
 electron configuration, **123**
 family of, **130**
 and fluorine, **169**
 and hydrochloric acid, **386–387**
 ionization energy, **143**
 and iron, **860**
 sacrificial electrodes of, **881**
 magnesium-22 isotope, **902**
 magnesium-28 isotope, **902**
 magnesium hydroxide, **772–773, 777–778**
 magnesium ions, **354, 777**
 magnesium oxide, **301–302, 524**
 magnetic field, **76**
 magnetic properties
 and crystal field strength, **1003–1004**
 of ions, **136–137**
 of liquid oxygen, **250–252**
 magnetic quantum number (m_l), **94–95**
 main-group elements, **116**
 atomic radii, **134**
 electron affinities, **144–145**
 electron configurations, **124–127**
 ionization energy, **140**
 valence electrons, **124–125**
 main-group hydrides, boiling points of, **495**
 malic acid, **687**
 malleability, of metals, **518**
 manganese, **859, 989**
 Manhattan Project, **912**
 manometer, **419**
 Markovnikov's rule, **956**
 Mars Climate Orbiter, **2–4, 19**
 Mars Curiosity Rover, **494**
 Mars Polar Lander, **3**
 mass. *See also* molar mass
 atomic, **54–57, 179**
 charge-to-mass ratio, **46**
 critical, **911**
 empirical formula molar, **188–189**
 and energy, **914–916**
 formula, **179**
 and kinetic molecular theory, **442**
 law of conservation of mass, **40, 42**
 molecular, **179**
 and moles, **58–61, 184–185**
 and number of molecules, **180**
 parts by, **554, 555**
 percent by, **554**
 unit of measurement, **5**
 mass action, law of, **643, 645, 648, 826**
 mass defect, **915–916**
 mass–energy, conservation of, **370**
 mass number (A), **52–53**
 mass percent composition, **182–183**
 mass spectrometry, **55–57**
 mass-to-mass conversions, **296–299**
 materials science, **505**
 mathematical operators, **93**
 matter. *See also* particulate nature of matter;
 states of matter
 building blocks of, **41**
 classification of, **37–39**
 composition of, **37–39, 368**
 countability of, **57**
 defined, **36**
 properties and structure of, **35–37**
 wave nature of, **88–93**
 Maxwell, James Clerk, **415**
 mean free path, **442–443**
 measurement. *See also* units of measurement
 of density, **14–15**
 of energy, **15–18**
 of pressure, **418–419**
 of reaction rates, **591–592**
 reliability of, **8–10**
 and significant figures, **10–14**
 and unit conversion, **18–19**
 medical solutions, **571–572**
 medicine, nuclear, **894, 922–924**
 Meitner, Lise, **910, 911**
 meitnerium, **910**
 melting, **489–490, 806**
 melting points, **168, 488, 519**
 membranes, semipermeable, **566**
 Mendeleev, Dmitri, **113, 115, 116, 124, 128**
 meniscus, **478**
 mercury, **52, 518**
 absorption spectra, **88**
 emission spectra, **85, 88**
 measuring pressure with, **418–419**
 meniscus of, **478**
 metal(s). *See also* transition metals
 (transition elements)
 and acids, **338**
 activity series of, **354–356**
 and alcohols, **962**
 alkali, **130, 307–309**
 alkaline earth, **130**
 in anionic complex ions, **994**
 bonding atomic radius for, **131**
 cations of, **717–718**
 corrosion of, **879–881**
 with invariant charges, **170**
 with multiple types of cations, **171–172**
 with one type of cation, **171**
 from ores, **879**
 periodic properties of, **128–129**

predicting dissolution of, **861**
 as reducing agents, **352**
 semimetals, **129**
 metal halides, **308**
 metal hydride, **871–872**
 metal hydroxides, **710, 782–783**
 metallic atomic solids, **518**
 metallic bonds, **518**
 metallic character, **145–147**
 metalloids, **129**
 metastable state, **898**
 meter (m), **4**
 methanal. *See* formaldehyde
 methane, **191, 944**
 and chlorine, **390–391, 954**
 combustion of, **300–301, 395**
 formula and models, **164**
 geometry, **225**
 hybrid orbitals, **254–256**
 Lewis structure, **936**
 standard enthalpy of formation, **393**
 methanoic acid (formic acid), **694, 754, 966**
 methanol, **960**
 geometry, **235**
 and sodium methoxide, **962**
 synthesis of, **445**
 uses, **961**
 vapor pressure, **486**
 method of initial rates, **594–595**
 method of successive approximations, **662, 701**
 methyl alcohol, **307**
 methylamine, **711, 968**
 methylammonium chloride, **969**
 3-methyl-1-butanethiol, **936**
 methyl butanoate, **967**
 3-methyl-1-butanol, **961**
 methylene chlorine (dichloromethane),
 485, 954
 3-methylhexane, **942**
 methyl isonitrile, **606–607**
 2-methyl-2-pentene, **950**
 methyl propanoate, **966**
 methyl red, **769**
 metric system, **4**
 Meyer, Julius Lothar, **115**
 microstates, **800–803**
 microwaves, **79**
 milk of magnesia, **774**
 Millikan, Robert, **46–47, 50**
 milliliter (mL), **8**
 millimeter of mercury (mmHg), **418, 419**
 miscibility, **471, 542**
 mixtures, **38, 39**
 compounds vs., **160**
 electrolysis of, **875**
 of gases, **433–439**
 heterogeneous, **39**
 homogeneous, **39**
 racemic, **942**
 m_l (magnetic quantum number), **94–95**
 mL (milliliter), **8**
 mmHg (millimeter of mercury), **418, 419**
 MO diagrams. *See* molecular orbital diagrams
 moisture, rusting and, **880**
 mol % (mole percent), **556**

molality (*m*), **554**
 molar heat capacity, **374**
 molarity (*M*)
 in calculations, 321–322
 and concentration of solutions, 553–554
 defined, 320–321
 molar mass, **179–181**
 defined, 58
 and dispersion force, 468
 and empirical formula, 188–189
 of gases, 432–433
 and standard molar entropies, 817
 and velocity distribution, 441
 molar solubility, **770–772**
 molar volume, **430, 446, 447**
 mole(s), **57–61**
 of compounds, 179–181
 in ideal gas law, 426–430
 and mass, 58–61, 184–185
 and number of atoms, 58
 and pressure, 446
 and volume, 424–425
 mole concept, **57, 60–61**
 molecular complexity, standard molar
 entropy and, **818**
 molecular compounds, **162**
 formulas and names for, 177–179
 Lewis structures of, 210–211
 molecular equations, **336, 337**
 molecular formulas, **162, 163, 188–189**
 molecular gastronomy, **318–320**
 molecular geometry
 basic shapes, 223–226
 of coordination compounds, 992–993
 and electron geometry, 232
 and electron groups, 215, 224, 225
 and hybridization, 256
 and lone pairs, 227–231
 and polarity, 235–239
 representing, on paper, 234
 and VSEPR, 231–235
 molecular impostors, **206**
 molecularity, **613–614**
 molecular mass, **179**
 molecular models, **164, 168**
 molecular orbital (MO) diagrams, **269, 271, 273, 274**
 molecular orbitals (MOs), **266–267**
 antibonding, 268–270
 bonding, 267–270, 276
 and energy bands, 525–526
 nonbonding, 277
 molecular orbital (MO) theory, **266–278**
 electron delocalization in, 266–277
 linear combinations of atomic orbitals, 267–270
 for polyatomic molecules, 277–278
 for second-period heteronuclear diatomic molecules, 276–277
 for second-period homonuclear diatomic molecules, 270–276
 molecular shape, **235–239, 469**
 molecular solids, **517**
 molecular structure, acid strength and, **691–693**
 molecular velocities, of gases, **440–442**

molecular weight, **179**
 molecules, **36**
 of compounds, 162
 delocalization of atomic orbitals over, 525
 mass and number of, 180
 of molecular solids, 517
 organic, 934–936
 polarity and shape of, 235–239
 predicting geometries of, 231–235
 properties of compounds vs., 159–160
 mole fraction (χ_a), **434, 436–437, 553**
 mole percent (mol%), **556**
 mole-to-mole conversions, **295–296**
 molten salts, electrolysis of, **875**
 molybdenum-102 isotope, **902**
 momentum, **89**
 monatomic anions, **171**
 monodentate ligands, **990**
 monomers, **527, 528**
 monoprotic acids, **693, 695**
 monosubstituted benzenes, **957–958**
 monoxide, **178**
 morphinan, **204**
 morphine, **204–206**
 MOs. *See* molecular orbitals
 Moseley, Henry, **115**
 MO theory. *See* molecular orbital theory
 motion, kinetic energy and, **368**
 m_s (spin quantum number), **94, 95**
 μ . *See* dipole moment
 multi-electron atoms
 electron configurations, 121–124
 sublevel energy splitting, 118–121
 multiple proportions, law of, **44**
 multiplication, **646**
 multistage linear accelerator, **918**
 multiwalled nanotubes (MWNTs), **522**

N

n. *See* principal quantum number; reaction order
 Nagasaki, Japan, **912**
 nanoribbons, **522**
 nanotubes, **522–523**
 natural abundance of isotopes, **52, 54, 55**
 natural gas
 alkanes in, 944
 combustion of, 290–291, 307, 369, 381
 efficiency of heating with, 798
 hydrocarbons in, 937
 molecular models, 164
Nature of Chemical Bond, The (Pauling), **207**
 negative charge, in voltaic cells, **852**
 neon
 and argon, 541
 electron configuration, 122, 126, 128
 emission spectra, 85, 87
 ion formation, 130
 isotopes of, 52–53
 Lewis structure, 165
 as noble gas, 130
 neopentane, **468–469**
 Nernst equation, **866–869**
 net ionic equations, **336–337**

network covalent atomic solids, **518, 520–523**
 neutral anions, **714, 715**
 neutral cations, **717**
 neutralization reactions. *See* acid–base reactions
 neutral solutions, **696–698, 718–720**
 neutron(s), **49**
 in isotopes, 52–53
 properties of, 50
 and valley of stability, 901, 902
 Newlands, John, **114**
 Newton, Isaac, **41**
 Newton's laws of motion, **92, 429**
 nickel, **518, 621, 859**
 nickel–cadmium (NiCad) batteries, **871**
 nickel(II) chloride, **335**
 nickel–metal hydride (NiMH) batteries, **871–872**
 nitrate, **174**
 nitrate ions, **340**
 nitric acid
 formula, 340
 oxidation of metals by, 861
 and PAN, 218
 and sodium carbonate, 347
 titrations with, 759
 uses, 686
 nitrite, **174**
 nitrite ions, **995**
 nitrito ligands, **995–996**
 nitrogen, **38, 83, 464**
 and ammonia, 43, 667–669
 and boron, 219
 and carbon-14 isotope, 907
 density, 431–432
 electronegativity, 216, 276
 and hemoglobin, 1006
 and hydrogen, 446, 667–670
 hydrogen bonding with, 472–473
 ionization energy, 143
 Lewis structure, 165, 176
 mean free path of, 443
 and oxygen, 44, 177, 187
 partial pressure in air, 433
 and potassium bromide, 550
 velocity distribution, 441
 volume occupied by, 427
 nitrogen-17 isotope, **918**
 nitrogen dioxide
 and carbon monoxide, 596–597, 610, 614–615
 oxygen to nitrogen ratio in, 44
 structure of, 178
 and water, 306
 nitrogen ions, **130**
 nitrogen monoxide
 in catalytic converters, 619
 and hydrogen, 596, 616–617
 Lewis structure, 218
 oxidation of, 649
 standard entropy, 818
 nitrogen narcosis, **436**
 nitrogen oxides, **913**
 nitrogen triiodide, **178**
 nitro ligands, **995–996**
 nitromethane, **215–216**
 nitrous acid, **754**

- noble gases, **128–130**
 boiling points, 468
 nonbonding atomic solids of, 518
 standard entropies, 817
- nodal plane, **100**
- nodes, orbital, **100**
- nomenclature, **169**
- nonbonding atomic radius (van der Waals radius), **131**
- nonbonding atomic solids, **518**
- nonbonding electrons, **175, 227**
- nonbonding orbitals, **277**
- nondirectional bonds, **177**
- nonelectrolyte(s), **328, 560–563**
- nonelectrolyte solutions, **328, 329**
- nonideal solutions, **561**
- nonmetal(s), **129, 131, 349**
- nonoxide ceramics, **524**
- nonpolar compounds, **471**
- nonpolar covalent bonds, **208**
- nonpolar molecules, **236**
- nonspontaneous processes
 and electrolytic cells, 849, 872–879
 entropy changes in surroundings for, 808–809
 made spontaneous, 824
 spontaneous vs., 798–799
- nonstandard conditions, cell potentials
 under, **866–868**
- nonstandard states, **826–829**
- nonvolatile liquids, **479**
- nonvolatile solutes, **558–560**
- normal boiling point, **483**
- normalization, **56**
- normal science, **41**
- Novoselov, Konstantin, **505, 506**
- n-type semiconductors, **527**
- ν . *See* frequency
- nuclear binding energy, **915–916**
- nuclear chemistry, **896**
 converting mass to energy, 914–916
 fission, 910–914
 fusion, 916, 917
 transmutation, 918–919
- nuclear equation(s), **896, 897**
- nuclear fission, **910–914**
- nuclear fusion, **916, 917**
- nuclear medicine, **894, 922–924**
- nuclear power, **912–914**
- nuclear reactions, transmutation in, **918–919**
- nuclear reactors, **913**
- nuclear theory of atom, **49**
- nucleon(s), **901, 902, 915, 916**
- nucleus(–i), **49, 893, 896, 901**
- nuclides, **895, 896, 904**
- nylon 6,6 polymer, **528**
- N/Z ratio, **901**
- octaves of elements, **114**
- octet(s), **166, 217–220**
- octet rule, **166, 177, 217–220**
- odd-electron species, **217–219**
- odorants, **935, 936**
- odors, of organic molecules, **934–936**
- OH[–] ions. *See* hydroxide ions
- oil, **238, 937**
- oil drop experiment, **46–47**
- olfaction, **935**
- olive, spherical, **318–320**
- 1s orbital, **99–100, 103, 119, 120**
- On the Revolution of the Heavenly Orbs* (Copernicus), **41**
- operators (mathematical), **93**
- opium poppy, **204, 205**
- Oppenheimer, J. R., **912**
- optical isomerism, **941–943, 998–999**
- orbital(s). *See* atomic orbitals (AOs); molecular orbitals (MOs)
- orbital blocks, periodic table, **125–126**
- orbital diagrams, **117, 118, 121–123**
- order
 bond, 269–270
 of reaction. *See* reaction order
- order of magnitude estimations, **23–24**
- ores, metals from, **879**
- organic chemistry, **935–973**
 alcohols, 961–963
 aldehydes and ketones, 963–965
 alkanes, 944–948
 alkenes, 948–953
 alkynes, 948, 950–952
 amines, 968–969
 aromatic hydrocarbons, 956–959
 carboxylic acids and esters, 966–968
 defined, 936
 ethers, 968
 functional groups, 960
 hydrocarbons, 937–959
 odors of organic molecules, 934–936
 properties of carbon, 936–937
 reactions of hydrocarbons, 953–956
- organic compounds, **191–192, 216–217**
- organic molecules, odors of, **934–936**
- orientation factor, **611–612**
- orientation of particles, reaction rate and, **587, 611**
- osmosis, **566–567, 571**
- osmosis cell, **567**
- osmotic pressure, **566–568**
- outer electron configuration, **126**
- out of phase (term), **80**
- overall buffer capacity, **754**
- overall order, **595–597**
- overcharge tolerance, **871**
- overlapping orbitals, **256**
- overvoltage, **877**
- oxalate ion, **990**
- oxidation
 of alcohols, 962–963, 965
 of carbon monoxide, 824
 defined, 846
 definition of, 349, 351
 of glucose, 824
 of hydrocarbons, 822
 of nitrogen monoxide, 649
 and oxidation number, 351–353
 selective, 861
- oxidation number. *See* oxidation states
- oxidation–reduction (redox) reactions, **347–356**
 balancing, 846–849
 corrosion, 879–881
 identifying, 351–353
 and oxidation states, 349–351
 predicting direction of, 859–861, 863
 spontaneous, 354–356, 849, 850
- oxidation states, **349–351, 846, 989**
- oxide ceramics, **524**
- oxidizing agents, **352, 353, 859**
- oxyacids, **340, 692**
- oxyanions, **174**
- oxygen, **52, 464, 918**
 and aluminum, 169
 and calcium, 169
 and carbon, 177, 371
 in carbon dioxide, 43, 44
 collecting, over water, 439
 color code, 36
 in combustion analysis, 175–177
 combustion of, 307
 electron configuration, 165
 electronegativity and energy of orbitals, 276
 emission spectrum, 87
 in fetal hemoglobin, 638–641
 in formation of ozone, 813
 and hemoglobin, 740, 1006
 hybridized orbitals of, 258
 from hydrocarbon combustion, 953
 and hydrogen, 177, 391
 hydrogen bonding with, 472–473
 hydrogen–oxygen fuel cell, 872
 ionization energy, 143
 and iron, 798
 Lewis structure, 165, 176
 magnetic property of liquid, 250–252
 and nitrogen, 44, 177, 187
 and nitrogen monoxide, 218
 oxidation state, 350, 351
 as oxidizing agent, 352
 oxyacid strength and bonding of, 692
 paramagnetism of, 274–275
 partial pressure, 433, 436
 properties of water vs., 158–160
 redox reactions without, 348
 reduction of, 879–880
 root mean square velocity, 441–442
 and silicon, 523, 937
 and sodium, 349
 from water, 36, 43, 186, 872–873
- oxygen toxicity, **436**
- ozone, **181**
 catalytic vs. noncatalytic destruction of, 618–619
 decomposition of, 609, 617–619
 and ethanol in gasoline, 961
 formation of, 813, 822
 molecular orbital model, 278
 in upper vs. lower atmosphere, 619–620
- ozone layer, **598, 620, 621**



Obama, Barack, **914**

observation, **39**

octahedral complexes, **1000–1001**

octahedral geometry, **226**

octane, combustion of, **286, 295–297, 348, 397–398**

P

- Pa (pascal), 418
- packing efficiency, 510
- palladium, 619, 621
- PAN (peroxyacetylnitrate), 218
- Pantheon, dome of, 524
- paramagnetic (term), 136, 251, 252, 274–275, 1003
- parent nuclide, 896
- partially hydrogenated vegetable oil, 955
- partial pressures (P_n), 433–437
 - collecting gases over water, 438–439
 - Dalton's law, 433–434
 - and deep-sea diving, 435–436
 - defined, 433
 - and equilibrium concentration, 660–661
 - equilibrium constant in terms of, 647–650
 - and total pressure, 434–435
 - of water, 828
- particle nature
 - of electron, 91
 - of light, 80–85
- particles, size of, 416
- particulate nature of matter
 - and exothermic/endothermic processes, 383
 - and kinetic molecular theory of gases, 415–417, 428–430
 - and matter classification, 37–39
 - and the mole, 57
 - and pressure, 417–419
 - and reaction rates, 586–587
 - and structure/properties, 35–37
- parts by mass, 554, 555
- parts by volume, 554–555
- parts per billion (ppb), 554
- parts per million (ppm), 554
- pascal (Pa), 418
- patchouli alcohol, 934, 936
- Pauli, Wolfgang, 117
- Pauli exclusion principle, 117–118
- Pauling, Linus, 159, 206, 251, 287
- p block, 125, 126
- P_c (critical pressure), 487
- penetrating power, 897
- penetration, electron, 119, 121
- pentaaminebromocobalt(II) chloride, 995
- pentaaminechlorocobalt(II) bromide, 995
- pentaaminenitrocobalt(III), 995
- pentaaquachlorochromium(III) chloride, 994
- pentanal, 964
- pentane, 471, 542, 938, 944
- n -pentane, 468–469, 482, 487
- pentanoic acid, 966
- 2-pentanol, 961
- 2-pentanone, 964
- percent by mass, 554
- percent ionic character, 209, 210
- percent ionization, acids, 706–707
- percent yield, 299, 300, 302, 304
- perchlorate, 174
- perfect crystals, 815–816
- peridot, 986
- periodic law, 115
- periodic property(-ies), 113–151
 - atomic radii, 131–135
 - defined, 114
 - density of aluminum, 112–113
 - effective nuclear charge, 133–134
 - electron affinity, 144–145
 - electron configurations and, 117–131, 136–137
 - for families of elements, 129–130
 - of ions, 130–131, 136–144
 - metallic character, 145–147
 - of metals and nonmetals, 128–129
 - orbital filling and, 117–124
 - valence electrons, 124–128
- periodic table
 - creation of, 114–117
 - electron configurations from, 126–127
 - orbital blocks in, 125–126
 - organization of, 50–52
- permanent dipoles, 470
- peroxyacetylnitrate (PAN), 218
- perpetual motion machines, 370, 796, 798
- per-* prefix, 174
- perturbation theory, 252
- PET (positron emission tomography), 923
- petroleum, 296–297, 937, 944. *See also* gasoline
- pH
 - of acids, 700–709
 - of bases, 710–713
 - of basic solutions, 711–713
 - buffer range, 753–754
 - buffers and changes in, 746–750
 - of buffer solutions, 742–744
 - equilibrium constant from, 705
 - indicator color and, 768–769
 - of mixtures of acids, 707–709
 - and percent ionization, 706–707
 - and pK_a , 761
 - of polyprotic acids, 721–723
 - of salt solutions, 718–720
 - and solubility, 774–775
 - of strong acids, 701
 - of strong bases, 710–712
 - of weak acids, 701–705
 - of weak bases, 710–713
- phase (of orbitals), 103
- phase changes, pressure and, 521
- phase diagrams, 491–494, 563–564
- pH curves, 755, 758, 759, 763–766
- phenol, 957
- phenolphthalein, 344, 768
- phenyl group, 958
- 3-phenylheptane, 958
- 4-phenyl-1-hexene, 958
- pH meters, 767
- phosphorescence, 894
- phosphoric acid, 720
- phosphorus, 123, 526–527, 918
- phosphorus-30 isotope, 898
- phosphorus-32 isotope, 923
- phosphorus pentachloride, 178
- photodissociation, 618
- photoelectric effect, 80–85
- photons, 82–84
- photosynthesis, 1007
- pH scale, 698–699
- physical changes, 289–290
- physical properties, 289
- pi (π) bonds, 258–259
- pK_a scale, 700, 761
- Planck, Max, 75, 82
- Planck's constant, 82
- plane-polarized light, 942–943
- platinum
 - in catalytic converters, 619
 - density, 14
 - electrodes of, 853, 854
 - and hydrogenation of ethene, 621
 - in hydrogen–oxygen fuel cell, 872
- Plato, 39, 41
- plum-pudding model, 48, 49
- plutonium-236 isotope, 906
- P_n . *See* partial pressures
- p -n junctions, 527
- pOH scale, 699–700
- polar compounds, 471
- polar covalent bonds, 206–207
- polarimetry, 592
- polarity
 - and acid strength, 691, 692
 - of bonds, 206–210, 691, 692
 - and molecular shape, 219–223
 - and solubility, 326
- polarizability, 468
- polarized light, rotation of, 942–943
- polar molecules, 235–237
- polar stratospheric clouds (PSCs), 620
- pollutants, 619–620
- polonium, 52, 895
- polyatomic ion(s)
 - balancing equations with, 294
 - in ionic compounds, 173–174
 - Lewis structures for, 212
 - oxidation numbers in, 351
- polyatomic molecules, 277–278
- polycyclic aromatic hydrocarbons, 959
- polydentate ligands, 991, 992
- polyethylene, 527–528
- polymers, 527–529
- polymorphs, 517
- polyprotic acids, 720–724
 - anions in weak solutions of, 723–724
 - pH of, 721–723
 - properties, 338
 - titrations of, 766–767
- polyvinyl chloride (PVC), 528
- Popper, Karl, 319
- p orbitals, 100, 102, 122
 - hybridization of, 255–263
 - mixing of s and, 273
- porcelain, 523–524
- porphyrin, 1006
- Portland cement, 524
- position
 - of electrons, 91
 - of mass spectrum peaks, 56
 - and potential energy, 368
- positive charge, in voltaic cells, 852
- positron emission, 895, 898–899
- positron emission tomography (PET), 923

positrons, **898–899**

potassium

- and bromine, 309, 612
- and chlorine, 166–167
- family of, 130
- flame tests for, 87
- and fluorine, 169
- oxidation state, 350
- and water, 308

potassium-40 isotope, **910**

potassium bromide, **550, 718**

potassium carbonate, **335**

potassium chlorate, **818–819**

potassium chloride, **171**

potassium hexacyano-ferrate(III), **994**

potassium hydroxide, **342, 343, 547, 688, 777–778**

potassium iodide, **331–334, 776**

potassium nitrate, **549**

potassium nitrite, **718**

potassium uranyl sulfate, **894–895**

potential difference, **851**

potential energy

- changes in systems to lower, 16
- defined, 15, 368
- in endothermic and exothermic processes, 383
- and entropy, 540–541
- and intermolecular forces, 467
- and standard electrode potential, 856
- transformation of kinetic and, 369

power (for work)

- ionizing, 897
- nuclear, 912–914
- penetrating, 897

power (mathematical), **22–23**

ppb (parts per billion), **554**

ppm (parts per million), **554**

precipitate, **331**

precipitation reactions, **331–336**

- aqueous ionic equilibrium in, 775–778
- in molecular gastronomy, 319–320
- selective precipitation, 777–778
- and supersaturated solutions, 549

precision, **9–10**

pre-exponential factor, **606, 609**

prefixes, **174, 945**

prefix multipliers, **6–7**

pressure(s). *See also* vapor pressure

- and area, 415, 417
- and Avogadro's law, 424, 425
- and Charles's law, 423
- constant-pressure calorimetry, 385–387
- on container wall, 428–429
- critical, 487
- defined, 415–416
- equilibrium and change in, 667–669
- equilibrium concentration from, 657–661
- equilibrium constant in terms of, 647–650
- free energy vs., 827
- in gases, 417–419
- gauge, 427
- Gibbs free energy at constant, 811
- heat in reactions at constant, 381–385
- in ideal gas law, 426–430
- and Le Châtelier's principle, 667–669

and number of moles of gases, 446

osmotic, 566–568

partial, 433–437

and phase changes, 521

on phase diagrams, 492

and solubility, 550–552

standard state, 815

and states of matter, 466

total, 427, 434–435

and volume in gases, 420–422, 668

and weather, 417

pressure–volume work, **377–379**

primary valence, **990**

principal level (principal shell), **95, 124, 126**

principal quantum number (n), **94, 127**

principles, **40**

probability density, **99–101**

probability distribution maps, **92–93**

problem solving

- with equations, 24–25
- four-step procedure, 20–21
- order of magnitude estimations, 23–24
- unit conversion problems, 18–19, 21–23
- units in, 3–4
- with units raised to a power, 22–23

products

- in chemical equations, 291
- of electrolysis, 875–878
- equilibrium concentrations of, 656–657
- gaseous, 444–445
- reaction rate and concentration of, 589
- and standard entropy change of reaction, 819
- states of, 290

proof, of alcoholic beverages, **961**

propane

- carbon bonds in, 191
- catenation of carbon in, 937
- combustion of, 384–385, 810
- formation of, 955
- formula, 944
- state of, 466

propanoic acid, **966, 967**

2-propanol, **965**

2-propanone, **965**

propene, **939, 955**

properties. *See also* colligative properties of solutions; periodic property(-ies)

- chemical vs. physical, 289
- complementary, 91
- extensive, 14, 816
- intensive, 14
- magnetic, 136–137, 250–252, 1003–1004

proportionality, **421**

propylene glycol, **564, 739**

propyne, **939**

protactinium-234 isotope, **903**

protein(s), **206, 969**

proton(s), **49**

- in Brønsted–Lowry acids and bases, 689–690
- of elements, 50–52
- ionizable, 693
- and valley of stability, 901, 902

proton acceptors, **689**

proton donors, **689**

Proust, Joseph, **43, 44**

PSCs (polar stratospheric clouds), **620**

p-type semiconductors, **527**

pure compounds, **393**

pure substances, **38, 39**

PVC (polyvinyl chloride), **528**

Pyrex®, **525**

Q

Q. *See* reaction quotient

quadratic equations, **658**

quantification, **3**

quantum (of light), **82–84**

quantum-mechanical model of atom, **75–106**

- and atomic spectroscopy, 85–88, 96–98
- defined, 76
- and diffraction, 80, 81
- and electromagnetic spectrum, 78–80
- and interference, 80, 81
- nature of light, 76–85
- and periodic properties, 114
- Schrödinger equation for hydrogen atom, 94–96
- and Schrödinger's cat, 74–76
- shapes of atomic orbitals, 99–103
- wave nature of matter, 88–93

quantum numbers, **94–96, 125**

quantum particles, behavior of, **76**

quarks, **918**

quartz, **523**

q_V (heat at constant volume), **380**

R

racemic mixtures, **942**

rad, **920**

radial distribution function, **99–102, 120**

radiation

- effects on life, 919–922
- electromagnetic, 76–77, 898
- and excitation, 96–97
- infrared, 79
- ultraviolet, 79

radiation detectors, **903**

radiation exposure, measuring, **920–922**

radicals. *See* free radicals

radioactive (term), **894**

radioactive decay, **900, 904–907**

- alpha, 895–897, 899
- beta, 897–900
- electron capture, 899
- positron emission, 898–899

radioactive decay series, **902–903**

radioactivity, **48**

- applications of, 922–924
- defined, 894
- detection of, 903
- in diagnosis of appendicitis, 892–894
- discovery of, 894–895
- effects of radiation on life, 919–922
- kinetics of radioactive decay, 904–907
- measuring age with, 907–910
- predicting type of, 900–903
- types of, 895–900
- and valley of stability, 900–903

- radiocarbon dating, **907–908**
 - radiometric dating, **907–910**
 - radiotherapy, **923–924**
 - radiotracers, **922–923**
 - radio waves, **79**
 - radium, **895**
 - radium-228 isotope, **897–898**
 - radon, **921**
 - radon-220 isotope, **904–905**
 - Rana sylvatica* (wood frogs), **538–540**
 - random error, **10**
 - randomization of energy, **541**
 - Raoult, François-Marie, **539**
 - Raoult's law, **559–561, 563**
 - rapture of the deep, **436**
 - rate constant(s) (*k*), **593**
 - determining, 596–597
 - and order of reaction, 594, 595
 - and temperature dependence of reaction rate, 606
 - rate-determining step, **614–615**
 - rate laws, **593–605**
 - defined, 593
 - for elementary steps, 613–614
 - first-order reaction, 594, 599–601, 603–604
 - and half-life of reaction, 603–604
 - integrated, 598–605
 - for overall reaction, 614–615
 - and reaction order, 593–597
 - second-order reaction, 594, 601–602, 604
 - zero-order reaction, 593–594, 603, 604
 - rate-limiting step, **614–616**
 - RBE (biological effectiveness factor), **921**
 - reactant(s)
 - in chemical equations, 291
 - concentration of, at given time, 601
 - equilibrium concentrations of, 656–657
 - in excess, 300, 305–306
 - gaseous, 444–445
 - limiting, 299–304
 - reaction order for multiple, 595–597
 - reaction rate and concentration of, 586, 588–589. *See also* rate laws
 - and standard entropy change of reaction, 819
 - states of, 290
 - reaction(s), **189, 287–311**
 - acid–base, 337–345
 - addition, 954–956
 - of alcohols, 961–963
 - of aldehydes and ketones, 965
 - of alkali metals, 307–309
 - of amines, 969
 - aqueous. *See* aqueous reactions
 - of aromatic compounds, 958–959
 - of carboxylic acids and esters, 967–969
 - chain, 911
 - and chemical change, 289–290
 - chemical equations for, 290–294
 - climate change and combustion of fossil fuels, 286–288
 - combustion. *See* combustion reactions (combustion)
 - condensation, 967
 - defined, 42
 - dehydration, 962
 - direction of change in, 653–656
 - electron transfer in, 845
 - elimination, 962
 - endothermic, 382–384, 391, 401, 670–672, 813–814
 - enthalpy of. *See* enthalpy of reaction (ΔH_{rxn})
 - equilibrium constant for, 644
 - exothermic, 167–168, 382–383, 391, 401, 670–672, 812, 813
 - first-order, 594, 599–601, 603–604
 - gases in, 444–446
 - gas-evolution, 346–347
 - half-life of, 603–604, 904–907
 - of halogens, 308–309, 954–955
 - heat evolved in, 381–385
 - of hydrocarbons, 953–956
 - internal energy change for, 379–381
 - irreversible, 825
 - limiting reactant of, 299–304
 - mass and energy in, 914
 - oxidation–reduction. *See* oxidation–reduction (redox) reactions
 - precipitation, 331–336, 549, 775–778
 - reactant in excess, 300, 305–306
 - reversible, 641, 806, 825
 - second-order, 594, 595, 601–602, 604
 - standard enthalpy change for, 394–395
 - standard entropy change for, 815–821
 - stepwise, 823–824
 - stoichiometry of, 295–306, 444–446
 - substitution, 954, 962–963
 - theoretical limits on work done by, 825–826
 - thermite, 396
 - thermodynamics of, 815–826
 - yield of, 299–304
 - zero-order, 593–595, 603, 604
 - reaction intermediates, **613**
 - reaction mechanisms, **613–618**
 - with fast initial step, 615–617
 - rate-determining steps and overall reaction rate laws, 614–615
 - rate laws for elementary steps, 613–614
 - two-step, 614–615
 - reaction order (*n*), **593–597**
 - defined, 593–594
 - determining, 594–595
 - for multiple reactants, 595–597
 - reaction quotient (*Q*), **653–656, 775–776, 868**
 - reaction rate(s), **584–626**
 - Arrhenius equation, 606–611
 - and catalysis, 618–622
 - and collision model of temperature, 611–612
 - and concentration, 593–605
 - defined, 588–591
 - in dynamic equilibrium, 641
 - in ectotherms, 585–586
 - and half-life of reaction, 603–604
 - integrated rate law, 598–605
 - measuring, 591–592
 - and order of reaction, 593–597
 - and particulate nature of matter, 586–587
 - for radioactive decay, 904–907
 - rate laws, 593–605
 - and reaction mechanism, 613–618
 - spontaneity of reaction vs., 798–799
 - and temperature, 606–612
 - reagents, unsymmetrical, **955**
 - real gases, **447–450**
 - rechargeable batteries, **871–872**
 - recrystallization, **550**
 - red blood cells, **571**
 - redox reactions. *See* oxidation–reduction reactions
 - reducing agents, **352, 353, 859**
 - reduction, **349, 846**
 - of aldehydes and ketones, 965
 - and oxidation number, 351–353
 - of oxygen, 879–880
 - standard electrode potentials for, 856
 - refractory materials, **524**
 - regions, on phase diagrams, **491–492**
 - relative abundance of isotopes, **56**
 - relative solubility, **772–773**
 - relative standard entropies, **816–819**
 - reliability of measurements, **8–10**
 - rem, **921**
 - repulsion, **223, 225, 231, 901**
 - resonance, **212–214**
 - resonance hybrids, **213, 214**
 - resonance stabilization, **213**
 - resonance structures, **213–214, 216–217**
 - respiration, **1007**
 - reverse direction, spontaneous reactions in, **355**
 - reversible (term), **641**
 - reversible processes, **806, 825**
 - revolutions, scientific, **41**
 - rhodium, **619**
 - ritonavir, **517**
 - rock candy, **550**
 - rock salt structure, **519–520**
 - roentgen, **921**
 - Roosevelt, Franklin, **911–912**
 - root mean square velocity, **441–442**
 - rotation, of polarized light, **942–943**
 - R* proportionality constant, **440**
 - rubbing alcohol, **464, 960, 961**
 - rubidium, **130, 309**
 - rubies, color of, **984–986**
 - rusting, **289, 347, 348, 798, 880–881**
 - ruthenium-112 isotope, **901**
 - Rutherford, Ernest, **48–50, 52, 895, 918**
 - rutherfordium, **52**
 - Rydberg, Johannes, **85**
 - Rydberg equation, **85, 97**
- S**
- S*. *See* entropy
 - ΔS . *See* entropy change
 - sacrificial electrodes, **881**
 - salicylic acid, **967**
 - salt bridges, **852**
 - salts. *See also* table salt
 - acid–base properties, 713–714, 718–720
 - defined, 342, 713
 - electrolysis of, 875
 - freezing point depression with, 558
 - in solutions, 326, 327, 540, 718–720, 876–877
 - saturated hydrocarbons, **944–948**. *See also* alkanes
 - saturated solutions, **549, 775**

- s block, **125, 126**
 Schrödinger, Erwin, **75, 76**
 Schrödinger equation, **93–96, 267**
 Schrödinger's cat, **74–76**
 science, **40–41**
 scientific approach to knowledge, **39–41**
 scientific laws, **40**
 scientific revolution, **41**
 scintillation counters, **903**
 screening (shielding), **119, 121, 133–134**
 scuba diving, **421**
 seawater, **566–567, 777**
 second (s), **4, 5**
 secondary valence, **990**
 second ionization energy (IE_2), **140, 143–144**
 second law of thermodynamics, **374**
 and biological systems, **810**
 and entropy, **799–804**
 and entropy changes of surroundings, **807–808**
 and “heat tax,” **798**
 second-order reactions
 defined, **594**
 half-life of, **604**
 identifying, from experimental data, **595**
 integrated rate law for, **601–602**
 second-period heteronuclear diatomic molecules, **276–277**
 second-period homonuclear diatomic molecules, **270–275**
 seesaw geometry, **229**
 selective oxidation, **861**
 selective precipitation, **777–778**
 selenium, **52, 127**
 semiconductors, **129, 526–527**
 semimetals, **129**
 semipermeable membranes, **566**
 SHE (standard hydrogen electrode), **854–856**
 shielding (screening), **119, 121, 133–134**
 SI. *See* International System of Units
 sievert (Sv), **921**
 sigma (σ) bonds, **258–259**
 significant figures (significant digits), **10–14**
 in calculations, **12–13**
 counting, **10–11**
 and exact numbers, **11–12**
 silica, **523–525**
 silicate ceramics, **523–524**
 silicate glass, **524–525**
 silicates, **523**
 silicon, **124, 129, 523, 526–527, 937**
 silicon dioxide, **518**
 silicon nitride, **524**
 silver, **56, 170, 354, 990**
 silver chloride, **770–771, 780–781**
 silver ions, **136, 778–779**
 silver nitrate, **330, 547, 776**
 silver plating, **873**
 simple cubic unit cell, **509–510**
 simple gas laws, **420–425**
 Avogadro's law, **424–425**
 Boyle's law, **420–422**
 Charles's law, **422–424**
 defined, **420**
 and ideal gas law, **426**
 single bonds, **175–176, 259–260**
 single-stage linear accelerators, **918**
 single-walled nanotubes (SWNTs), **522**
 skydiving, supersonic, **414–416**
 SLAC (Stanford Linear Accelerator), **918**
 snowflakes, **505**
 S° (standard molar entropies), **815–819**
 Socrates, **687**
 soda-lime glass, **525**
 soda pop, **550–551, 555**
 sodium
 atomic radii, **138**
 chemical symbol, **52**
 and chlorine, **42, 208, 348**
 from electrolysis of sodium chloride, **873**
 electron affinity, **145**
 electron configuration, **122, 128**
 emission spectrum, **88**
 family of, **130**
 flame tests for, **87**
 ionization energies, **140, 141, 143, 144**
 as metallic atomic solid, **518**
 and oxygen, **349**
 and sulfur, **167**
 and water, **308, 962**
 sodium acetate, **549, 741, 776**
 sodium alginate, **319–320**
 sodium benzoate, **745**
 sodium bicarbonate, **170, 714**
 and hydrochloric acid, **346–347**
 polyatomic ions in, **173**
 uses, **688**
 and vinegar, **319**
 sodium bromide, **776**
 sodium carbonate, **331, 347**
 sodium chloride, **39, 505**
 Born–Haber cycle for production of, **398–400**
 common name, **170**
 consumption of, **183**
 electrolysis of, **873, 875, 877**
 enthalpy of solution for, **547**
 formation of, **42, 307**
 freezing point depression with, **569**
 ion–dipole forces in solutions of, **475**
 ionic bonding in, **166**
 as ionic solid, **517**
 lattice energy, **167–168**
 neutral solutions of, **718**
 and potassium iodide, **331, 333**
 solubility, **326–328, 540**
 in solution, **545, 548–549, 554–555, 558, 799–800**
 structure, **519–520**
 vapor pressure lowering with, **570**
 sodium fluoride, **547, 718**
 sodium hydroxide, **338, 688**
 and hydrochloric acid, **340–341**
 and hydrofluoric acid, **342**
 from metal and water reaction, **962**
 and propanoic acid, **967**
 titrations with, **756–764, 766**
 in water, **554**
 sodium hypochlorite, **173**
 sodium ions, **54, 138, 330, 519–520, 875**
 sodium methoxide, **962**
 sodium nitrate, **335**
 sodium nitrite, **173**
 sodium oxide, **179, 298–299**
 sodium propanoate, **967**
 solid(s). *See also* crystalline solids
 amorphous, **465**
 atomic, **518**
 defined, **37**
 entropy and state changes for, **804–806**
 fusion of, **488–489**
 on heating curves, **489–491**
 in heterogeneous equilibria, **650–651**
 intermolecular forces in, **466–478**
 ionic, **168, 517, 519–520**
 liquids and gases vs., **464–466**
 metallic atomic, **518**
 molecular, **517**
 network covalent atomic, **518, 520–523**
 nonbonding atomic, **518**
 on phase diagrams, **491–494**
 properties of, **465**
 solubility of, **549–550**
 standard molar entropies of, **816**
 standard state for, **393, 815**
 sublimation of, **487–488**
 solubility, **540–544**
 of amphoteric metal hydroxides, **782–783**
 and common ion effect, **773–774**
 and complex ion equilibria, **780–782**
 of gases, **550–552**
 of ionic compounds, **329–331, 769–775**
 molar, **770–772**
 and pH, **774–775**
 and pressure, **550–552**
 relative, **772–773**
 of solids, **549–550**
 and temperature, **549–550**
 of vitamins, **543–544**
 solubility equilibria, **769–775**
 solubility-product constant (K_{sp}), **769–775**
 and common ion effect, **773–774**
 and molar solubility, **770–772**
 and precipitation, **775–776**
 and relative solubility, **772–773**
 and selective precipitation, **777**
 solubility rules, **330, 769**
 soluble compounds, **329–331, 540, 775**
 solutes, **320, 540**
 interactions between, **542**
 nonvolatile, **558–560**
 solvent interactions with, **326, 542**
 volatile, **560–563**
 solution(s), **319–331, 539–575**. *See also*
 acidic solutions; aqueous solutions;
 basic solutions
 colligative properties of, **558–572**
 concentrated, **320, 552**
 concentration of, **320–324, 552–557**
 defined, **540**
 dilute, **320, 552**
 electrolyte, **327–329, 569–572**
 energetics for formation of, **544–548**
 enthalpy of, **545–547**
 equilibrium in, **548–552**
 hyperosmotic, **571**
 hyposmotic, **571**

- ideal, 560–561
- isosmotic, 571, 572
- isotonic, 571
- medical, 571–572
- in molecular gastronomy, 318–320
- neutral, 696–698, 718–720
- nonelectrolyte, 328, 329
- nonideal, 561
- saturated, 549, 775
- and solubility, 540–544
- standard state for, 393, 815
- stock, 322, 323
- stoichiometry of, 325–326
- supersaturated, 549, 776
- thirsty, 567
- types of, 540
- unsaturated, 549, 775
- in voltaic cells, 852
- in wood frog cells, 538–540
- solvent(s), 540.** *See also specific solvents*
 - boiling point elevation in, 564
 - common laboratory, 542
 - defined, 320
 - freezing point depression in, 564
 - interactions between, 542
 - mole fraction for, 555
 - solute interactions with, 326, 542
- Solve step (in problem solving), 20**
- s orbitals, 99–101, 122**
 - hybridization of, 255–263
 - mixing of *p* and, 273
- Sort step (in problem solving), 20**
- $\Delta S^\circ_{\text{rxn}}$. *See* standard entropy change for a reaction
- sp^2 hybridization, 257–260
- sp^3d^2 hybridization, 263
- sp^3d hybridization, 262
- sp^3 hybridization, 255–257
- space-filling molecular models, 164
- specific heat capacity (C_s), 374–375
- spectator ions, 336
- spectrochemical series, 1002
- spectrometers, 592
- spectrometry, 55–57, 592
- spectroscopy, 85–88, 96–98
- speed, spontaneity of reaction vs., 798–799
- spherification, 318–320
- sp* hybridization, 261–262
- spin, of unpaired electrons, 274
- spin quantum number (m_s), 94, 95
- spontaneity
 - conditions for, 831
 - and entropy changes for surroundings, 808
 - and free energy change, 812–815
 - for redox reactions, 863
 - and second law of thermodynamics, 801
 - and standard change in free energy, 824
- spontaneous processes**
 - electricity from, 849–853
 - making, 824
 - nonspontaneous vs., 798–799
 - and predicting direction of redox reactions, 859–861, 863
- spontaneous redox reactions, 354–356, 849, 850**
- square planar complexes, 1005**
- square planar geometry, 230**
- square pyramidal geometry, 230**
- ΔS_{sur} . *See* entropy change for surroundings
- stability**
 - and nuclear binding energy, 915
 - of nuclei, 896, 901
 - and potential energy, 16
 - valley of, 900–903
- stalactites, 774**
- stalagmites, 774**
- standard atomic weight.** *See* atomic mass
- standard cell potential ($\Delta E^\circ_{\text{cell}}$), 852**
 - in concentration cells, 869
 - and equilibrium constant, 864–865
 - and free energy, 861–863
 - and standard change in free energy, 862–863, 865
- standard change in free energy ($\Delta G^\circ_{\text{rxn}}$), 820–826**
 - and equilibrium constant, 829–832
 - from free energies of formation, 821–823
 - free energy changes in nonstandard states vs., 826–829
 - from $\Delta H^\circ_{\text{rxn}}$ and $\Delta S^\circ_{\text{rxn}}$, 820–821
 - and Nernst equation, 866
 - and spontaneity, 824
 - and standard cell potential, 862–863, 865
 - for stepwise reaction, 823–824
 - theoretical limits on, 824–826
- standard conditions, 820, 826, 861**
- standard electrode potentials, 854–861**
 - from potentials of half-reactions, 858
 - predicting direction of redox reaction with, 859–861
 - predicting dissolution of metals with, 861
 - of selected substances, 857
 - and standard hydrogen electrode, 854–856
- standard emf.** *See* standard cell potential (E°_{cell})
- standard enthalpy change (ΔH°), 392–395**
- standard enthalpy change for a reaction ($\Delta H^\circ_{\text{rxn}}$), 815, 820–821**
- standard enthalpy of formation (ΔH°_f), 392–398, 815, 819**
- standard entropy change, 815, 819**
- standard entropy change for a reaction ($\Delta S^\circ_{\text{rxn}}$), 815–821**
 - calculating, 819
 - defined, 815
 - standard change in free energy from, 820–821
 - third law of thermodynamics and S° , 815–819
- standard heat of formation.** *See* standard enthalpy of formation (ΔH°_f)
- standard hydrogen electrode (SHE), 854–856**
- standard molar entropies (S°), 815–819**
- standard state, 392, 393, 815, 826, 852**
- standard temperature and pressure (STP), molar volume at, 430**
- standard units of measurement, 4–8**
- Stanford Linear Accelerator (SLAC), 918**
- state functions, 370, 801**
- states of matter, 37–38.** *See also specific states*
 - changes between, 466
 - in chemical equations, 290
 - entropy and changes in, 804–807
 - properties of, 465
 - and standard molar entropies, 816
- stationary states, 86**
- steam, 490, 491, 807–808**
- steam burn, 479**
- stepwise reactions, standard change in free energy for, 823–824**
- stereoisomerism, 941–943, 996–999**
- Stern–Gerlach experiment, 136**
- stock solutions, 322, 323**
- stoichiometry, 295–306**
 - defined, 287, 295
 - for electrolysis, 878–879
 - with ΔH , 384–385
 - limiting reactant and yield, 299–303
 - mass-to-mass conversions, 296–299
 - mole-to-mole conversions, 295–296
 - for pH changes in buffers, 746–747
 - reactant in excess, 305–306
 - for reactions with gases, 444–446
 - for solutions, 325–326
- STP (standard temperature and pressure), molar volume at, 430**
- Strassmann, Fritz, 910**
- Strategize step (in problem solving), 20**
- strong acid(s)**
 - acid–base reactions involving, 342
 - and buffer solutions, 746–750
 - defined, 688
 - as electrolytes, 329
 - hydronium ion concentration and pH of, 701, 705
 - ionization constants, 693, 694
 - mixtures of weak and, 707–708
 - in titrations, 756–759, 765–766
- strong base(s)**
 - and buffer solutions, 747–750
 - counterions of, 717
 - defined, 689
 - hydroxide ion concentration and pH of, 710–712
 - in titrations, 756–766
- strong electrolyte(s), 328, 329, 569–572, 688**
- strong-field complexes, 1001**
- strong-field ligands, 1002, 1003**
- strong force, 901**
- strontium, 88, 130**
- strontium chloride, 294**
- structural formulas, 162–164, 938–941**
- structural isomers, 938, 995–996**
- Structure of Scientific Revolutions, The* (Kuhn), 41
- styrene, 957**
- subatomic particles, 50–54**
- subjectivity, in science, 40–41**
- sublevels (subshells), 95, 117–121**
- sublimation, 487–488, 594**
- sublimation energy, 398**
- subscripts, in chemical equations, 291**
- substance(s)**
 - defined, 37
 - pure, 38, 39
 - standard state for, 815
- substituents, 945**
- substituted benzenes, 957**
- substituted polyethylenes, 528**
- substitution reactions, 954, 962–963**
- substrates, enzyme, 622**
- successive approximations, method of, 662, 701**
- sucrase, 622**

sucrose, 555

- combustion of, 380–381
- enzyme-catalyzed reaction of, 622
- freezing point depression by, 569
- hydrolysis of, 586, 591–592
- vapor pressure lowering by, 559–560

sugar(s)

- alcohol from, 961
- burning of, 289
- as organic compound, 191
- solubility of, 549
- in solutions, 326–328, 540

sulfate ions, 340**sulfides, 774****sulfite ions, 340****sulfur, 52**

- and carbon, 351
- electron configuration, 123
- hybrid orbitals, 255, 263
- ion formation, 131
- and sodium, 167

sulfur hexafluoride, 219, 263**sulfuric acid, 686, 693**

- formation of, 298
- ionization constant, 721
- ionization of, 338
- in lead–acid storage batteries, 871
- and lithium sulfide, 346
- pH of, 722–723
- and potassium hydroxide, 342

sulfurous acid, 340, 720–721, 766**sulfur oxides, 913****sun, nuclear fusion on, 917****supercritical fluids, 487****supersaturated solutions, 549, 776****supersonic skydiving, 414–416****surface tension, 476–477****surroundings**

- entropy changes for, 807–810
- and systems, 17, 369, 372
- transfer of energy to, 371–372

Sv (sievert), 921**sweating, 479****SWNTs (single-walled nanotubes), 522****systematic error, 10****systematic names, 170****Système International d'Unités, 4****systems**

- energy flow in, 369
- entropy changes in surroundings and, 807–808, 825
- internal energy change of, 370–372
- and surroundings, 17, 369, 372

T **$t_{1/2}$ (half-life) of reaction, 603–604, 904–907****table salt, 164, 166, 170, 191, 517. See also sodium chloride** **T_c (critical temperature), 487****technetium-99m isotope, 923****tellurium, 115****temperature**

- and Arrhenius equation, 606–611
- and average kinetic energy, 416

and Avogadro's law, 424, 425

and boiling point, 483–486

and Boyle's law, 421

and change in entropy, 806, 808–809

collision model of, 611–612

critical, 487

and energy, 478–479

equilibrium and changes in, 670–672

and equilibrium constants, 651, 831–832

Gibbs free energy at constant, 811

global, 288

heat capacity and changes in, 374–376

in ideal gas law, 426–430

and kinetic molecular theory of gases, 416

and Le Châtelier's principle, 670–672

and melting, 488

and molecular velocity of gases, 440–442

on phase diagram, 492

and reaction rate, 587, 606–612

and solubility, 549–550

and spontaneity, 812–815

and standard free energy change, 820–821

and state of matter, 37, 466

and thermal energy, 368

unit of measurement, 5–6

and vapor pressure, 438, 483–486

and viscosity, 477

and volume in gases, 422–424

temporary dipoles, 468**terminal atoms, 210****termolecular steps, 613****tetrachloromethane (carbon tetrachloride), 814, 954****tetrahedral complexes, 1004****tetrahedral geometry, 224–225****tetrahedral hole, 520****tetrahedron, 164, 224****tetraphosphorus decasulfide, 178****theoretical yield, 299–304****theories, 40, 41****therapeutic agents, 1007****therapeutic techniques, radioactivity in, 922–924****thermal energy**

defined, 15, 368

dispersal of, 541

distribution of, 478, 608

in endothermic and exothermic processes, 383

and intermolecular forces, 464

transfer of, 376–377, 803

thermal equilibrium, 374**thermite reaction, 396****thermochemistry, 367–405**

changes in enthalpy, 385–398

changes in internal energy, 379–381

defined, 368

enthalpy, 381–385, 391–398

first law of thermodynamics, 370–373

flaming ice demonstration, 366–368

heat, 373–377

lattice energies for ionic compounds, 398–401

and nature of energy, 368–369

work, 377–379

thermodynamics, 787–835

in chemical reactions, 815–826

defined, 370

entropy, 799–810, 815–819

and equilibrium, 829–832

first law of, 370–373, 797, 803

free energy, 811–815, 820–832

and heat tax on energy transactions, 797–798

heat transfer, 807–810

microstates and macrostates in, 800–801

in nonstandard states, 826–829

second law of. *See* **second law of**

thermodynamics

spontaneous vs. nonspontaneous processes, 798–799

state changes, 804–807

third law of, 815–819

thermoluminescent dosimeters, 903**third ionization energy (IE_3), 140****third law of thermodynamics, 815–819****thirsty solutions, 567****Thomson, J. J., 45–46, 48****thorium-232 isotope, 904****3d orbitals, 100, 102, 120****3p orbitals, 120****3s orbitals, 120****threshold frequency, 82****time**

and concentration, 598–605

unit of measurement, 5

tin, 52, 170, 918**titanium, 304–306****titration curves. See pH curves****titrations, 755–769**

as acid–base reactions, 343–345

indicators for, 767–769

of polyprotic acids, 766–767

of strong acids, 756–759

of weak acids, 760–765

of weak bases, 765–766

Tokamak fusion reactor, 917**toluene, 517, 957****torr, 418****Torricelli, Evangelista, 418****total energy, 15****total force, 428–429****total pressure, 427, 434–435****trajectory, 92–93****trans isomers**

of alkenes, 952–953

of coordination compounds, 996–997

properties of, 260

transition metals (transition elements), 170.

See also coordination compounds

atomic radii, 134–135, 987–988

and color of rubies and emeralds, 984–986

electron configurations, 126–128, 986–987

electronegativity, 988–989

in human body, 1006

ionization energy, 988

oxidation states, 989

on periodic table, 116

transition state, 607**transitions, electron, 86–87, 97–98****transmutation, 918–919****transuranium elements, 919****triads of elements, 114****trichloromethane, 954**

trigonal bipyramidal geometry, **225**
 trigonal planar geometry, **224**
 trigonal pyramidal geometry, **227**
 trimethylamine, **969**
 triple bond(s), **176, 261–262, 936–937**
 triple point, **492**
 triprotic acids, **694**
 tritium, **917**
 truth, of theories, **41**
 T-shaped geometry, **229**
 turquoise, **986**
 2p orbitals, **100, 102, 103, 120**
 2s orbital, **100, 101, 120**
 3s orbital, **100, 101**
 two-point forms of equations
 Arrhenius equation, **610**
 Clausius–Clapeyron equation, **486**
 two-step reaction mechanisms, **614–615**

U

ultraviolet (UV) radiation, **79**
 uncertainty principle, **90–92**
 unimolecular steps, **613**
 unit cells, **508–514, 519–521**
 unit conversion problems, **21–23**
 United States, radiation exposure in, **921**
 units of measurement
 converting, **18–19, 21–23**
 defined, **3, 4**
 derived, **7**
 energy, **16–17**
 entropy, **806**
 equilibrium constant, **649–650**
 prefix multipliers for, **6–7**
 pressure, **418–419**
 in problem solving, **3–4**
 raising, to a power, **22–23**
 reaction rate, **588–589**
 SI base units, **3–6**
 standard, **4–8**
 volume, **7–8**
 universe
 age of, **910**
 entropy changes in, **807–808, 811, 825**
 entropy of, **801–802**
 unpaired electrons, **252, 274**
 unsaturated hydrocarbons, **948–953**. *See also*
 alkenes; alkynes
 cis–trans isomerism in, **952–953**
 naming, **950–952**
 unsaturated solutions, **549, 775**
 unsymmetrical alkenes, **955**
 uranic rays, **895**
 uranium, **52, 910–911, 913**
 uranium-235 isotope, **911**
 uranium-238 isotope, **911**
 alpha decay of, **896**
 radioactive decay series, **902–903**
 radiometric dating with, **909–910**
 transmutation of, **919**
 uranium/lead radiometric dating, **909–910**
 U.S. Department of Agriculture (USDA), **924**
 U.S. Department of Energy (DOE), **296**

U.S. Food and Drug Administration (FDA),
 183, 924
 UV (ultraviolet) radiation, **79**

V

V (volt), **851**
 valence, coordination compound, **990**
 valence band, **525**
 valence bond theory, **252–266**
 for coordination compounds, **1000**
 hybridization of atomic orbitals, **254–266**
 orbital overlap in, **252–254**
 sp^2 hybridization, **257–260**
 sp^3d^2 hybridization, **263**
 sp^3d hybridization, **262**
 sp^3 hybridization, **255–257**
 sp hybridization, **261–262**
 writing hybridization and bonding schemes,
 263–266
 valence electrons, **124–128, 164–166**
 valence shell electron pair repulsion (VSEPR)
 theory, **205, 222–235**
 five basic shapes of atoms, **223–226**
 lone pairs in, **227–231**
 predicting molecular geometries with, **231–235**
 valley of stability, **900–903**
 van der Waals, Johannes, **447, 448**
 van der Waals constants, **447–448**
 van der Waals equation, **449**
 van der Waals radius (nonbonding atomic radius),
 131
 vandium, **136**
 vandium ion, **136**
 vanillin, **964**
 van't Hoff factor (*i*), **539–540**
 vaporization (evaporation), **478–481**
 energetics of, **479–481**
 process of, **478–479**
 of water, **478–479, 799, 813–814, 826–828**
 vaporization curve, **492**
 vapor pressure, **481–486**
 and critical point, **487**
 and dynamic equilibrium, **481–482**
 lowering of, **558–563, 570–571**
 and temperature, **483–486**
 of water, **438, 481**
 variational principle, **267**
 vector quantities, **237–238**
 vegetable oil, **955**
 velocities
 of electrons, **91**
 of gases, **440–442**
 root mean square, **441–442**
 and temperature, **416, 441**
 ventilation, **443**
 “Venus of Dolni,” **523**
 vinegar, **319, 687**. *See also* acetic acid
 viscosity, **477**
 visible light, **78, 79**
 vitamin A, **543**
 vitamin B₅, **543, 544**
 vitamin C, **543**
 vitamin K₃, **543**

vitamins, solubility of, **543–544**
 vitreous silica, **525**
 volatile liquids, **479**
 volatile solutes, **560–563**
 volcanoes, **297**
 volt (V), **851**
 Volta, Alessandro, **845**
 voltaic (galvanic) cells, **849–853, 873–874**
 volume
 and amount of gas in moles, **424–425**
 constant-volume calorimetry, **380–381, 387**
 equilibrium and change in, **667–669**
 heat at constant volume, **380**
 in ideal gas law, **426–430**
 and Le Châtelier's principle, **667–669**
 lung, **422, 425**
 molar, **430, 446, 447**
 parts by, **554–555**
 and pressure, **420–422, 668**
 of real gases, **447–448**
 and temperature, **422–424**
 unit cell, **512**
 units of measurement, **7–8**
 and work, **377–379**
 VSEPR theory. *See* valence shell electron pair
 repulsion theory

W

W (watt), **17**
 War Crimes 4: *Judgement at Gotham* (comic book
 series), **685**
 water, **37, 39, 57, 177**. *See also* aqueous reactions;
 aqueous solutions
 in absence of gravity, **462–464**
 from acid–base reactions, **342, 967**
 and alkali metals, **307–308**
 amphoterism, **696**
 atoms in, **36**
 autoionization of, **696–697**
 boiling point elevation, **565**
 boiling point of, **494–495**
 and calcium, **846**
 and carbon dioxide, **650, 726, 1007**
 chemical formula, **162**
 collecting gases over, **438–439**
 from combustion, **307, 384, 953**
 decomposition of, **43, 186, 872–873**
 electrolysis of, **875–876**
 electrostatic potential map, **326**
 elimination of, **962**
 evaporation/vaporization of, **478–479, 799,**
 813–814, 826–828
 formation of, **446, 689**
 freezing of, **807–809, 813**
 freezing point depression, **564**
 from fuel cells, **872, 873**
 geometry, **228**
 heat capacity, **374, 376**
 heating curve, **489–491**
 heat of fusion, **488–489**
 hydrogen bonding in, **474**
 hydronium ion vs., **176**
 intermolecular forces in, **466**
 Lewis structure, **175**

water (cont.)

- meniscus of, 478
- and oil, 238
- partial pressure, 828
- and pentane, 471
- phase diagram, 491–493
- physical changes in, 289, 290
- polarity, 236
- properties, 35, 36, 158–160, 494–495
- real gas behavior, 449
- and rubidium, 309
- and sodium, 962
- solubility in, 540, 550–551
- as solvent, 320, 542, 544–545, 548–549, 558
- standard molar entropy, 816
- states of, 464–465
- structure, 35, 36, 164
- from substitution reactions, 962
- surface tension, 476–477
- thermal energy transfer to, 376–377
- vapor pressure, 438, 481, 483

waters of hydration, 174**Watson, James, 507****watt (W), 17****wave function, 93, 267****wavelength (λ), 84**

- de Broglie, 89–90
- of light, 77, 78

wave nature

- of electrons, 88–89, 91
- of light, 76–78
- of matter, 88–93

wave-particle duality, 76, 84**wax, 937****weak acid(s)**

- acid–base reactions involving, 343
- acid ionization constant, 694
- and buffer solutions, 740–741
- cations as, 717–718
- defined, 688
- diprotic, 723–724
- as electrolytes, 329

- equilibrium constant for ionization, 694–696
- in mixtures, 707–709
- percent ionization, 706–707
- pH of, 701–705
- titrations of, 760–765

weak base(s)

- anions as, 714–717
- in buffer solutions, 750–751
- cations as conjugate acids of, 717
- defined, 689
- pH of, 710–713
- titrations of, 765–766

weak electrolytes, 329, 688**weak-field complexes, 1001****weak-field ligands, 1002, 1003****weather, pressure and, 417****weighing, estimation in, 9****weight, 5, 179. See also atomic mass****weighted linear sum, 267****Werner, Alfred, 985, 990, 993****white light, 78, 85, 86****Wilhelmy, Ludwig, 586, 591–592****Wilkins, Maurice, 507****window glass, 525****Witt, Otto N., 739****Wöhler, Friedrich, 935****wood alcohol, 961. See also methanol****wood frogs, 538–540****work**

- defined, 15
- and energy, 368
- and internal energy, 372–373
- quantification of, 377–379
- theoretical limit on, 825–826

World War II, 911–912**X****xenon, 130, 448, 518*****x* is small approximation**

- and equilibrium concentration, 662–664
- and Henderson–Hasselbalch equation, 744, 746

- and pH in buffer solutions, 747
- and pH of polyprotic acids, 724
- and pH of weak acids, 701–703, 705

X-ray crystallography, 506–508**X-ray diffraction, 507–508****X-rays, 79****Y****yield**

- actual, 300
- percent, 299, 300, 302, 304
- theoretical, 299–304

Yucca Mountain, Nevada, 914**Z****Z. See atomic number** **Z_{eff} (effective nuclear charge), 119, 133–134****zero-order reaction**

- defined, 593–594
- half-life of, 604
- identifying, from experimental data, 595
- integrated rate law for, 603

zinc, 170, 518

- and carbonic anhydrase, 1007
- and copper, 849, 850, 852–853, 873–874
- in dry-cell batteries, 870
- galvanized nails coated with, 881
- and hydrochloric acid, 338, 438, 439, 861

zinc blende structure, 520**zinc ion, 136–137****zinc sulfide, 520**

Conversion Factors and Relationships

Length

SI unit: meter (m)
1 m = 1.0936 yd
1 cm = 0.39370 in.
1 in = 2.54 cm (exactly)
1 km = 0.62137 mi
1 mi = 5280 ft
1 mi = 1.6093 km
1 Å = 10 ⁻¹⁰ m

Temperature

SI unit: kelvin (K)
0 K = -273.15°C
= -459.67°F
K = °C + 273.15
°C = $\frac{(^{\circ}\text{F} - 32)}{1.8}$
°F = 1.8 (°C) + 32

Energy (derived)

SI unit: joule (J)
1 J = 1 kg·m ² /s ²
= 0.23901 cal
= 1 C·V
= 9.4781 × 10 ⁻⁴ Btu
1 cal = 4.184 J
1 eV = 1.6022 × 10 ⁻¹⁹ J

Pressure (derived)

SI unit: pascal (Pa)
1 Pa = 1 N/m ²
= 1 kg/(m·s ²)
1 atm = 101,325 Pa
= 760 torr
= 14.70 lb/in ²
1 bar = 10 ⁵ Pa
1 torr = 1 mmHg

Volume (derived)

SI unit: cubic meter (m ³)
1 L = 10 ⁻³ m ³
= 1 dm ³
= 10 ³ cm ³
= 1.0567 qt
1 gal = 4 qt
= 3.7854 L
1 cm ³ = 1 mL
1 in ³ = 16.39 cm ³
1 qt = 32 fluid oz

Mass

SI unit: kilogram (kg)
1 kg = 2.2046 lb
1 lb = 453.59 g
= 16 oz
1 amu = 1.66053873 × 10 ⁻²⁷ kg
1 ton = 2000 lb
= 907.185 kg
1 metric ton = 1000 kg
= 2204.6 lb

Geometric Relationships

π	= 3.14159...
Circumference of a circle	= $2\pi r$
Area of a circle	= πr^2
Surface area of a sphere	= $4\pi r^2$
Volume of a sphere	= $\frac{4}{3}\pi r^3$
Volume of a cylinder	= $\pi r^2 h$

Fundamental Constants

Atomic mass unit	1 amu 1 g	= 1.66053873 × 10 ⁻²⁷ kg = 6.02214199 × 10 ²³ amu
Avogadro's number	N_A	= 6.02214179 × 10 ²³ /mol
Bohr radius	a_0	= 5.29177211 × 10 ⁻¹¹ m
Boltzmann's constant	k	= 1.38065052 × 10 ⁻²³ J/K
Electron charge	e	= 1.60217653 × 10 ⁻¹⁹ C
Faraday's constant	F	= 9.64853383 × 10 ⁴ C/mol
Gas constant	R	= 0.08205821 (L·atm)/(mol·K) = 8.31447215 J/(mol·K)
Mass of an electron	m_e	= 5.48579909 × 10 ⁻⁴ amu = 9.10938262 × 10 ⁻³¹ kg
Mass of a neutron	m_n	= 1.00866492 amu = 1.67492728 × 10 ⁻²⁷ kg
Mass of a proton	m_p	= 1.00727647 amu = 1.67262171 × 10 ⁻²⁷ kg
Planck's constant	h	= 6.62606931 × 10 ⁻³⁴ J·s
Speed of light in vacuum	c	= 2.99792458 × 10 ⁸ m/s (exactly)

SI Unit Prefixes

a	f	p	n	μ	m	c	d	k	M	G	T	P	E
atto	femto	pico	nano	micro	milli	centi	deci	kilo	mega	giga	tera	peta	exa
10 ⁻¹⁸	10 ⁻¹⁵	10 ⁻¹²	10 ⁻⁹	10 ⁻⁶	10 ⁻³	10 ⁻²	10 ⁻¹	10 ³	10 ⁶	10 ⁹	10 ¹²	10 ¹⁵	10 ¹⁸

Selected Key Equations

Density (E.5)

$$d = \frac{m}{V}$$

Kinetic Energy (E.6)

$$\text{KE} = \frac{1}{2}mv^2$$

Frequency and Wavelength (2.2)

$$\nu = \frac{c}{\lambda}$$

Energy of a Photon (2.2)

$$E = h\nu$$

$$E = \frac{hc}{\lambda}$$

De Broglie Relation (2.4)

$$\lambda = \frac{h}{m\nu}$$

Heisenberg's Uncertainty Principle (2.4)

$$\Delta x \times m \Delta v \geq \frac{h}{4\pi}$$

Energy of Hydrogen Atom Levels (2.5)

$$E_n = -2.18 \times 10^{-18} \text{ J} \left(\frac{1}{n^2} \right) (n = 1, 2, 3, \dots)$$

Coulomb's Law (3.3)

$$E = \frac{1}{4\pi\epsilon_0} \frac{q_1 q_2}{r}$$

Dipole Moment (5.2)

$$\mu = qr$$

Solution Dilution (8.2)

$$M_1 V_1 = M_2 V_2$$

Internal Energy (9.3)

$$\Delta E = q + w$$

Heat Capacity (9.4)

$$q = m \times C_s \times \Delta T$$

Pressure–Volume Work (9.4)

$$w = -P \Delta V$$

Change in Enthalpy (9.6)

$$\Delta H = \Delta E + P \Delta V$$

Standard Enthalpy of Reaction (9.10)

$$\Delta H_{\text{rxn}}^{\circ} = \sum n_p \Delta H_f^{\circ} (\text{products}) - \sum n_r \Delta H_f^{\circ} (\text{reactants})$$

Ideal Gas Law (10.4)

$$PV = nRT$$

Dalton's Law (10.6)

$$P_{\text{total}} = P_a + P_b + P_c + \dots$$

Mole Fraction (10.6)

$$\chi_a = \frac{n_a}{n_{\text{total}}}$$

Average Kinetic Energy (10.8)

$$\text{KE}_{\text{avg}} = \frac{3}{2}RT$$

Root Mean Square Velocity (10.8)

$$u_{\text{rms}} = \sqrt{\frac{3RT}{\mathcal{M}}}$$

Effusion (10.9)

$$\frac{\text{rate A}}{\text{rate B}} = \sqrt{\frac{\mathcal{M}_B}{\mathcal{M}_A}}$$

Van der Waals Equation (10.11)

$$\left[P + a \left(\frac{n}{V} \right)^2 \right] [V - nb] = nRT$$

Clausius–Clapeyron Equation (11.5)

$$\ln P_{\text{vap}} = \frac{-\Delta H_{\text{vap}}}{RT} + \ln \beta$$

$$\ln \frac{P_2}{P_1} = \frac{-\Delta H_{\text{vap}}}{R} \left(\frac{1}{T_2} - \frac{1}{T_1} \right)$$

Henry's Law (13.4)

$$S_{\text{gas}} = k_H P_{\text{gas}}$$

Raoult's Law (13.6)

$$P_{\text{solution}} = \chi_{\text{solvent}} P^{\circ}_{\text{solvent}}$$

Freezing Point Depression (13.6)

$$\Delta T_f = m \times K_f$$

Boiling Point Elevation Constant (13.6)

$$\Delta T_b = m \times K_b$$

Osmotic Pressure (13.6)

$$\Pi = MRT$$

The Rate Law (14.4)

$$\text{Rate} = k[A]^n \quad (\text{single reactant})$$

$$\text{Rate} = k[A]^m[B]^n \quad (\text{multiple reactants})$$

Integrated Rate Laws and Half-Life (14.5)

Order	Integrated Rate Law	Half-Life Expression
0	$[A]_t = -kt + [A]_0$	$t_{1/2} = \frac{[A]_0}{2k}$
1	$\ln[A]_t = -kt + \ln[A]_0$	$t_{1/2} = \frac{0.693}{k}$
2	$\frac{1}{[A]_t} = kt + \frac{1}{[A]_0}$	$t_{1/2} = \frac{1}{k[A]_0}$

Arrhenius Equation (14.6)

$$k = A e^{\frac{-E_a}{RT}}$$

$$\ln k = -\frac{E_a}{R} \left(\frac{1}{T} \right) + \ln A \quad (\text{linearized form})$$

$$k = pz e^{\frac{-E_a}{RT}} \quad (\text{collision theory})$$

K_c and K_p (15.4)

$$K_p = K_c (RT)^{\Delta n}$$

pH Scale (16.6)

$$\text{pH} = -\log[\text{H}_3\text{O}^+]$$

Henderson–Hasselbalch Equation (17.3)

$$\text{pH} = \text{pK}_a + \log \frac{[\text{base}]}{[\text{acid}]}$$

Entropy (18.3)

$$S = k \ln W$$

Change in the Entropy of the Surroundings (18.5)

$$\Delta S_{\text{surr}} = \frac{-\Delta H_{\text{sys}}}{T}$$

Change in Gibbs Free Energy (18.6)

$$\Delta G = \Delta H - T \Delta S$$

The Change in Free Energy: Nonstandard Conditions (18.9)

$$\Delta G_{\text{rxn}} = \Delta G_{\text{rxn}}^{\circ} + RT \ln Q$$

$\Delta G_{\text{rxn}}^{\circ}$ and K (18.10)

$$\Delta G_{\text{rxn}}^{\circ} = -RT \ln K$$

Temperature Dependence of the Equilibrium Constant (18.10)

$$\ln K = -\frac{\Delta H_{\text{rxn}}^{\circ}}{R} \left(\frac{1}{T} \right) + \frac{\Delta S_{\text{rxn}}^{\circ}}{R}$$

ΔG° and E°_{cell} (19.5)

$$\Delta G^{\circ} = -nFE^{\circ}_{\text{cell}}$$

E°_{cell} and K (19.5)

$$E^{\circ}_{\text{cell}} = \frac{0.0592 \text{ V}}{n} \log K$$

Nernst Equation (19.6)

$$E_{\text{cell}} = E^{\circ}_{\text{cell}} - \frac{0.0592 \text{ V}}{n} \log Q$$

Einstein's Energy–Mass Equation (20.8)

$$E = mc^2$$